

CHEMISTRY**BOOKS - MARVEL CHEMISTRY****BASIC PRINCIPLES AND TECHNIQUES IN ORGANIC CHEMISTRY****MCQs**

1. A crystalline substance is that

- A. In which unit particles are arranged in an orderly and systematic manner
- B. Which is insoluble in water
- C. Which does not have specific shape
- D. Which does not have sharp melting point

Answer: A

[View Text Solution](#)

2. The study of organic compounds even at present is done separate from other compounds because

- A. The formation of organic compounds is not based on chemical combination
- B. Organic compounds are covalent

C. Catenation is the main characteristics

D. It is the easiest method of study

Answer: B

 [View Text Solution](#)

3. The purity of an organic solid is determined by :

A. Melting point

B. Boiling point

C. Solubility

D. Density

Answer: A

 [Watch Video Solution](#)

4. Organic compound are non-conductors of electricity because

A. are insoluble in water

B. do not form ions

C. have low melting point

D. form free radicals

Answer: B

 [Watch Video Solution](#)

5. Which of the following is not the criterion of purity of a substance ?

- A. Solubility
- B. Melting point
- C. Boiling point
- D. Density

Answer: A

 [View Text Solution](#)

6. Which of the following is an amorphous substance ?

- A. Glucose
- B. Glass
- C. Alum
- D. Common salt

Answer: B

 [Watch Video Solution](#)

7. Sodium chloride crystals are

- A. Cubical
- B. Octahedral
- C. Needle shaped
- D. Triangle shaped

Answer: A

 [View Text Solution](#)

8. Alum crystals are

- A. Cubical
- B. Octahedral
- C. Needle shaped
- D. Prismatic

Answer: B

 [View Text Solution](#)

9. Quartz crystals are

- A. Prismatic
- B. Hexagonal
- C. Cubical

D. Needle shaped

Answer: B

 [View Text Solution](#)

10. In paper chromatography

A. Mobile phase is liquid and stationary phase is solid

B. Mobile phase is solid and stationary phase is liquid

C. Both phases are solids

D. Both phases are liquids

Answer: D

 [View Text Solution](#)

11. The most satisfactory method to separate sugars is to use

A. Fractional crystallization

B. Sublimation

C. Chromatography

D. Benedict solution

Answer: C

 [Watch Video Solution](#)

12. An organic substance from its aqueous solution can be separated by

- A. Solvent extraction
- B. Steam distillation
- C. Distillation
- D. Fractional distillation

Answer: A

 [Watch Video Solution](#)

13. Simple distillation can be used to separate

- A. A mixture of benzene (boiling point 80°C) and toluene (boiling point 110°C)
- B. A mixture of ether (boiling point 35°C) and toluene (boiling point 110°C)
- C. A mixture of ethanol (boiling point 78°C) and water (boiling point 100°C)
- D. None of these

Answer: B

 [Watch Video Solution](#)

14. Glycerol can be separated from spent dye in soap industry by

- A. Vacuum distillation
- B. Steam distillation
- C. Sublimation
- D. Crystallization

Answer: A

 [View Text Solution](#)

15. A bottle containing two immiscible liquids is given to you . They may be separated by using a

- A. Fractionating column
- B. Separating funnel
- C. Vacuum distillation
- D. Steam distillation

Answer: B

 [Watch Video Solution](#)

16. Some organic compounds are purified by distillation at low pressure because the compounds are `

- A. Low boiling liquids
- B. High boiling liquids
- C. Highly volatile

D. Decomposed before reaching their boiling points

Answer: D

 [Watch Video Solution](#)

17. In steam distillation the vapour pressure of the volatile organic compound is

- A. Equal to atmospheric pressure
- B. Less than atmospheric pressure
- C. More than atmospheric pressure
- D. None of these

Answer: B

 [Watch Video Solution](#)

18. Liquids which decompose below their normal boiling point can be distilled at lower temperature by

- A. Increasing the pressure
- B. Decreasing the pressure
- C. Heating in water bath
- D. Heating in sand bath

Answer: B

 [Watch Video Solution](#)

19. Separation of organic compounds by column chromatography is due to:

- A. Selective adsorption
- B. Selective absorption
- C. Solubilities
- D. Selective adsorption and selective absorption

Answer: A

 [Watch Video Solution](#)

20. Which process is suitable for the purification of aniline ?

- A. Vacuum distillation
- B. Steam distillation
- C. Fractional distillation
- D. Fractional crystallization

Answer: B

 [Watch Video Solution](#)

21. The best and latest technique for isolation, purification and separation of organic compound is

- A. Chromatography
- B. Distillation under reduced pressure
- C. Differential extraction
- D. Fractional crystallization

Answer: A

 [Watch Video Solution](#)

22. Which of the following technique is most suitable for purification of cyclohexanone from a mixture containing benzoic acid, isoamylalcohol, cyclohexane and cyclohexanone ?

- A. Crystallisation
- B. IR spectroscopy
- C. Sublimation
- D. Gas chromatography

Answer: C

 [Watch Video Solution](#)

23. The process of obtaining a solid in its pure crystalline form , from its solution is known as _____.

- A. Crystallization
- B. Distillation

C. Extraction with solvents

D. Chromatograph

Answer: A

 [Watch Video Solution](#)

24. Process used for the separation of compounds from the mixture of two or more miscible liquids having large difference in boiling points is called

A. Simple distillation

B. Fractional distillation

C. Crystallization

D. Fractional crystallization

Answer: A

 [View Text Solution](#)

25. Separation of binary mixture of acetone and benzene is done by _____.

A. Flasks

B. Fractionating columns

C. Round bottom flasks

D. None of these

Answer: B

 [Watch Video Solution](#)

26. To determine the melting point, powdered substance is filled in

- A. Fusion tube
- B. Boiling tube
- C. Beaker
- D. Capillary tube

Answer: D

 [Watch Video Solution](#)

27. To determine the boiling point, liquid is filled in

- A. Capillary tube
- B. Boiling tube
- C. Fusion tube
- D. Thiele's tube

Answer: C

 [View Text Solution](#)

28. The two solids of variable solubilities are separated by the process of _____.

- A. Crystallization
- B. Filtration
- C. Distillation
- D. Fractional distillation

Answer: A

 [Watch Video Solution](#)

29. In Lassaigne's test for N, S and halogens, organic compound is

- A. Fused with sodium
- B. Dissolved with sodamide
- C. Extracted with sodamide
- D. Fused with calcium

Answer: A

 [Watch Video Solution](#)

30. The sodium extract on acidification with acetic acid and then adding lead acetate solution gives a black precipitate. The organic compound contains.

- A. Nitrogen

B. Halogen

C. Sulphur

D. Phosphorous

Answer: C

 [Watch Video Solution](#)

31. During Lassaigne's test N and S present in an organic compound changes into

A. NaCN and Na_2S

B. NaSCN

C. Na_2SO_4 and NaCN

D. Na_2S and NaCNO

Answer: A

 [Watch Video Solution](#)

32. In an organic compound phosphorus is estimated as

A. $\text{Mg}_2\text{P}_2\text{O}_7$

B. H_3PO_4

C. $\text{Mg}_3(\text{PO}_4)_2$

D. P_2O_5

Answer: A

 [View Text Solution](#)

33. Simple distillation (or distillation) is used to separate liquids which differ in their boiling point by

A. 5°C

B. 10°C

C. $30^{\circ}\text{C}-50^{\circ}\text{C}$

D. 20°C

Answer: C

 [Watch Video Solution](#)

34. In Lassaigne's test, the organic compound is fused with a piece of sodium metal in order to

A. Increase ionization of the compound

B. Decrease melting point of the compound

C. Increase reactivity of the compound

D. Convert covalent compound into a mixture of ionic compounds

Answer: D

 [Watch Video Solution](#)

35. 0.20 g of hydrocarbon on combustion gave 0.66 g CO_2 . The percentage of hydrogen in the hydrocarbon is about

- A. 33
- B. 45
- C. 10
- D. 90

Answer: C

 [Watch Video Solution](#)

36. Kjeldahl's method cannot be used for the estimation of nitrogen in

- A. Pyridine
- B. Nitro compounds
- C. Azo compounds
- D. All the above

Answer: D

 [Watch Video Solution](#)

37. Halogens can be estimated by

- A. Duma's method

- B. Carius method
- C. Leibig's method
- D. Kjeldahl's method

Answer: B

 [Watch Video Solution](#)

38. In organic compound sulphur is estimated as

- A. H_2SO_4
- B. BaSO_4
- C. SO_2
- D. BaCl_2

Answer: B

 [Watch Video Solution](#)

39. 0.58 g of hydrocarbon on combustion gave 0.9 g water. The percentage of carbon is about

- A. 75.8
- B. 82.7
- C. 27.85
- D. 68.8

Answer: B

 [Watch Video Solution](#)

40. If 0.32 g of an organic compound containing sulphur produces 0.233 g of BaSO_4 Then the percentage of sulphur in it is

- A. 10
- B. 15
- C. 20
- D. 25

Answer: A

 [Watch Video Solution](#)

41. Dumas method is used for the estimation of _____.

- A. Carbon
- B. Nitrogen
- C. Oxygen
- D. Sulphur

Answer: B

 [Watch Video Solution](#)

42. If we want to study the relative arrangement of atoms in a molecule, we study

- A. Empirical formula
- B. Molecular formula
- C. Structural formula
- D. None of these

Answer: C

 [Watch Video Solution](#)

43. In Duma's method, the gas which is collected in Nitrometer is

- A. N_2
- B. NO
- C. NH_3
- D. H_2

Answer: A

 [Watch Video Solution](#)

44. In Duma's method, the gas which is collected in Nitrometer is

- A. N_2

B. `NH_3`

C. `NO_2`

D. `N_2O_3`

Answer: B

 [Watch Video Solution](#)

45. In Kjeldahl's method, the nitrogen present in the organics compound is converted into

A. Ammonia

B. Ammonium phosphate

C. Ammonium sulphate

D. Ammonium hydroxide

Answer: C

 [Watch Video Solution](#)

46. 0.4 g of an organic compound gave 0.188 g of silver bromide by a halogen estimation method. The percentage of bromine in the compound is

(At. mass of Ag = 108, Br = 80)

A. 0.398

B. 0.46

C. 0.2

D. 0.4

Answer: C

 [View Text Solution](#)

47. Lassaigne's test for the detection of nitrogen will fail in case of `

A. NH_2CONH_2

B. $\text{H}_2\text{NCONHNH}_2 \cdot \text{HCl}$

C. $\text{H}_2\text{N} \cdot \text{NH}_2 \cdot 2\text{HCl}$

D. $\text{C}_6\text{H}_5\text{NHNH}_2 \cdot 2\text{HCl}$

Answer: C

 [Watch Video Solution](#)

48. 0.5 g of an organic compound containing 1 nitrogen on Kjeldahlising required 29 ml of $\text{N}/5\text{H}_2\text{SO}_4$ for complete neutralization of ammonia. The percentage of nitrogen in the compound is

A. 34.3

B. 16.2

C. 21.6

D. 14.8

Answer: B

 [View Text Solution](#)

49. 2.79 g of an organic compound when heated in Carius tube with conc. HNO_3 and H_3PO_4 formed converted into MgNH_4PO_4 ppt. The ppt. on heating gave 1.332 g of $\text{Mg}_2\text{P}_2\text{O}_7$. The percentage of P in the compound is

- A. 23.33
- B. 13.33
- C. 33.33
- D. 26.66

Answer: B

 [View Text Solution](#)

50. In the estimation of sulphur organic compound on treating with conc. HNO_3 is converted to

- A. SO_2
- B. H_2S
- C. H_2SO_4
- D. SO_3

Answer: C

 [Watch Video Solution](#)

51. In Carius method, 0.099 g organic compound gave 0.287 g AgCl. The percentage of chlorine in the compound will be

- A. 28.6
- B. 71.7
- C. 35.4
- D. 64.2

Answer: B

 [Watch Video Solution](#)

52. 0.24 g of an organic compound gave 0.22 g O_2 on complete combustion. If it contains 1.66% hydrogen, then the percentage of C and O will be

- A. 12.5 and 36.6
- B. 25 and 73.4
- C. 25 and 36.6
- D. 25 and 80

Answer: B

 [Watch Video Solution](#)

53. Which of the following is the best scientific method to test the presence of water in liquid ?

- A. Use of anhydrous copper sulphate
- B. Use of litmus paper
- C. Taste
- D. Smell

Answer: A

 [Watch Video Solution](#)

54. _____ is filled in U-tube to absorb water from the organic mixture.

- A. KOH
- B. NaOH
- C. Anhydrous CaCl_2
- D. NaCl

Answer: C

 [Watch Video Solution](#)

55. Empirical formula of an organic compound having molecular weight 60 is CH_2O . What is its molecular formula?

- A. $\text{C}_6\text{H}_{12}\text{O}_6$

B. $\text{C}_4\text{H}_8\text{O}_4$

C. $\text{C}_3\text{H}_6\text{O}_3$

D. $\text{C}_2\text{H}_4\text{O}_2$

Answer: D

 [Watch Video Solution](#)

56. In the dumas method , for the the estimation of nitrogen , 0.84 g of an oranic compound gave 448 mL of nitrogen at S. T .P the percentage of nitrogen in the compound is _____.

A. 33.3

B. 66.7

C. 50

D. 60

Answer: B

 [Watch Video Solution](#)

57. 0.395 g of an organic compound by Carius method for the estimation of S gave 0.582 g of BaSO_4

The percentage of S in the compound is

A. 20.24

B. 35.62

C. 12.24

D. 40.65

Answer: A

 [Watch Video Solution](#)

58. In sulphur estimation, 0.157 g of an organic compound gave 0.4813 g of barium sulphate. What is the percentage of sulphur in the compound?

A. 46

B. 56

C. 42.1

D. 32

Answer: C

 [Watch Video Solution](#)

59. 0.40g of an organic compound containing phosphorus gave 0.555 g of $\text{Mg}_2\text{P}_2\text{O}_7$ by usual analysis calculate the % of phosphorus in the organic compound

A. 35

B. 40

C. 38.75

D. 45

Answer: C

 [Watch Video Solution](#)

60. 0.4 g of an organic compound in Dumas method, gave 50 ml of nitrogen collected at 300 K and 745 mm pressure Calculate the percentage composition of nitrogen in the compound. Aqueous tension at 300 K is 15 mm.

A. 0.4332

B. 0.6439

C. 0.2242

D. 0.1367

Answer: D

 [View Text Solution](#)

61. In Dumas method for estimation of nitrogen, 0.25 g of an organic compound gave 50 ml of nitrogen collected at 288 K temperature and 745 mm pressure. Calculate the percentage of nitrogen in the compound. Aqueous tension at 288 K is 12.7 mm.

A. 0.228

B. 0.378

C. 0.428

D. 0.578

Answer: A

 [View Text Solution](#)

62. 15 mL of 1M H_2SO_4 is completely neutralized by ammonia liberated from 0.6 g of compound in Kjeldahl's method. Find out the percentage of nitrogen in the compound

A. 30

B. 50

C. 70

D. 85

Answer: C

 [Watch Video Solution](#)

63. 0.16 g of an organic compound gave 0.5 g of barium sulphate in Carius method of estimation of sulphur. Calculate the percentage of sulphur in the compound.

A. 42.91

B. 52.91

C. 62.91

D. 72.91

Answer: A

 [Watch Video Solution](#)

64. A sample of 0.50 gm of an organic compound was treated according to Kjeldahl's method the ammonia evolved was absorbed in 50 ml of $0.5M H_2SO_4$. The residual acid required 60 cm of 0.5M solution of $NaOH$ for neutralisation. Find the percentage composition of nitrogen in the compound.

- A. 36
- B. 56
- C. 76
- D. 86

Answer: B

 [Watch Video Solution](#)

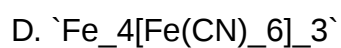
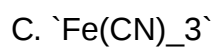
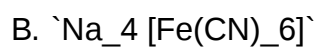
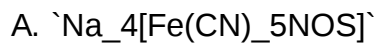
65. In Lassaigne's test for nitrogen the blue colour is due to the formation of

- A. Potassium ferrocyanide
- B. Sodium cyanide
- C. Sodium ferrocyanide
- D. Ferriferrocyanide

Answer: D

 [Watch Video Solution](#)

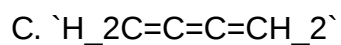
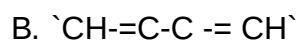
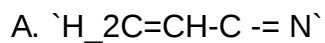
66. The compound formed in the positive test for nitrogen with Lassaigne's solution of an organic compound is



Answer: D

[▶ Watch Video Solution](#)

67. Which of the following represent the given mode of hybridisation $\text{sp}^2\text{-sp}^2\text{-sp-sp}$ from left to right?

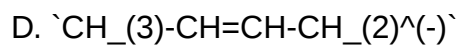
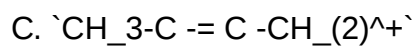
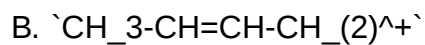
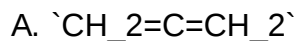


D.

Answer: A

 [Watch Video Solution](#)

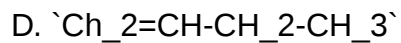
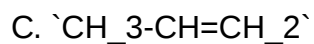
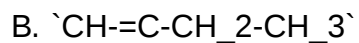
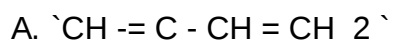
68. In which of the following species, all the three types of hybrid carbons are present ?



Answer: C

 [Watch Video Solution](#)

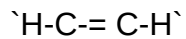
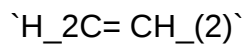
69. In which of the following compound sp^2 -hybridisation is absent



Answer: B

 [Watch Video Solution](#)

70. Basic strength of



A. (i) > (iii) > (ii)

B. (i) > (ii) > (iii)

C. (ii) > (i) > (iii)

D. (iii) > (ii) > (i)

Answer: B

 [View Text Solution](#)

71. The compound in which all carbon atoms use only sp^3 -hybrid orbitals for bond formation is:

A. HCOOH

B. $(\text{NH}_2)_2\text{CO}$

C. $(\text{CH}_3)_3\text{COH}$

D. $(\text{CH}_3)_3\text{CHO}$

Answer: C

 [Watch Video Solution](#)

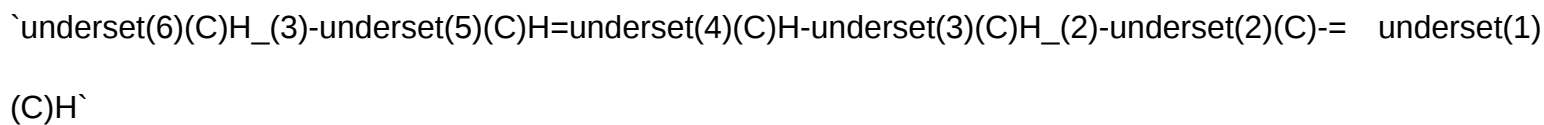
72. Homolytic fission of carbon-carbon bond of ethane produces an intermediate in which the carbon atom is in

- A. sp^3 hybridised
- B. sp^2 hybridised
- C. sp hybridized
- D. sp^3 hybridized

Answer: B

 [Watch Video Solution](#)

73. In the hydrocarbon



The state of hybridization of carbons 1,3 and 5 are in the following sequence

- A. sp, sp^2, sp^3
- B. sp^3, sp^2, sp
- C. sp^2, sp, sp^3
- D. sp, sp^3, sp^2

Answer: D

 [Watch Video Solution](#)

74. Example of sp^2 hybridization is

- A. CH_3^+
- B. CH_3
- C. $C_2H_5^+$
- D. C_2H_5

Answer: A

 [View Text Solution](#)

75. Acetylene molecule contain

- A. 5 sigma bond
- B. 4 sigma bond and 1 pi bond
- C. 3 sigma " and " 2 pi`
- D. 3 sigma " and "3 pi`

Answer: C

 [Watch Video Solution](#)

76. The compound 1,3-butadiene has

- A. sp and sp^2 hybridized C-atoms
- B. sp, sp^2 and sp^3 hybridized C-atoms

C. Only sp^2 hybridized C-atoms

D. Only sp hybridized C-atoms

Answer: C

 [Watch Video Solution](#)

77. The number of sigma and pi-bonds in 1-butene 3-yne are:

A. 7 sigma, 3 pi

B. 5 sigma, 2 pi

C. 8 sigma, 3 pi

D. 6 sigma, 2 pi

Answer: A

 [Watch Video Solution](#)

78. Which is an acid hydrocarbon ?

A. $\text{CH}_3\text{CH}_2\text{CH}_2\text{CH}_3$

B. $\text{CH}_3\text{C}=\text{CCH}_3$

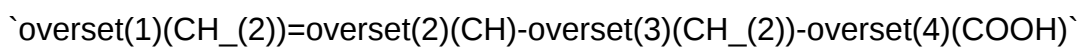
C. $\text{CH}_3\text{C}=\text{CH}$

D. $\text{CH}_2=\text{CH}-\text{CH}=\text{CH}_2$

Answer: C

 [View Text Solution](#)

79. Which carbon-atoms has tetrahedral geometry



- A. 1
- B. 2
- C. 3
- D. 4

Answer: C

 [Watch Video Solution](#)

80. The hybridisation of carbon atoms in C - C single bond is $\text{HC}=\text{C}-\text{CH}=\text{CH}_2$ is

- A. sp^3-sp^3
- B. $\text{sp}-\text{sp}^2$
- C. sp^3-sp
- D. sp^2-sp^3

Answer: B

 [Watch Video Solution](#)

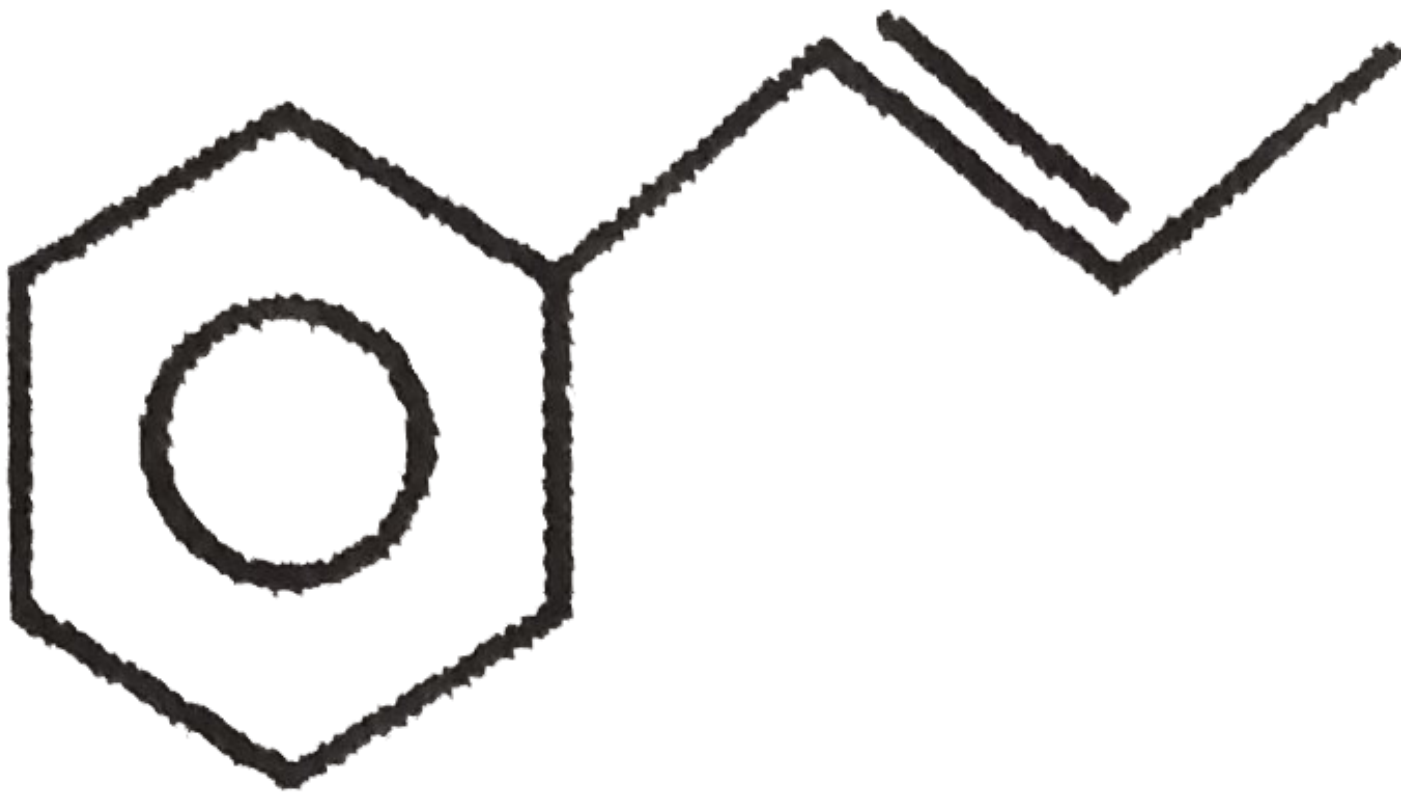
81. Hybridisation of CH_3^+ and CH_3^- are

- A. sp and sp^2 respectively
- B. sp^2 and sp^2 respectively
- C. sp^2 and sp^3 respectively
- D. sp^3 and sp^3 respectively

Answer: C

[View Text Solution](#)

82. How many bonds are there in



- A. 14 sigma, 8 pi
- B. 19 sigma, 4 pi

C. $9\alpha, 4\pi$

D. $14\alpha, 2\pi$

Answer: B

 [Watch Video Solution](#)

83. The number of σ - and π bonds present in pent-4-en-1-yne is :

A. 10, 3

B. 3, 10

C. 4, 9

D. 9, 4

Answer: A

 [Watch Video Solution](#)

84. Hybridization of 1 and 2 carbon atoms in $\overset{(1)}{\text{CH}_2}=\overset{(2)}{\text{C}}=\text{CH}_2$

A. sp, sp

B. sp^2, sp^2

C. sp^2, sp

D. sp^3, sp^2

Answer: C

 [Watch Video Solution](#)

85. Only two isomeric monochloro derivatives are possible for

- A. n-butane
- B. 2,4-dimethyl pentane
- C. Benzene
- D. 1-methyl propane

Answer: A

 [Watch Video Solution](#)

86. The isomer of diethyl ether is

- A. $(\text{CH}_3)_2\text{CHOH}$
- B. $(\text{CH}_3)_3\text{C-OH}$
- C. $\text{C}_3\text{H}_7\text{OH}$
- D. $(\text{C}_2\text{H}_5)_2\text{CHOH}$

Answer: B

 [Watch Video Solution](#)

87. The isomerism exhibits by alkyl cyanide and alkyl isocyanide is

- A. Functional
- B. Positional
- C. Tautomerism
- D. Metamerism

Answer: A

 [Watch Video Solution](#)

88. IUPAC name of the compound

$\text{CH}_3\text{-(CH}_2\text{)}_4\text{-CH(CH}_3\text{)-CH(CH}_3\text{)-CH}_2\text{-CH}_2\text{-CH}_2\text{-CH}_3$

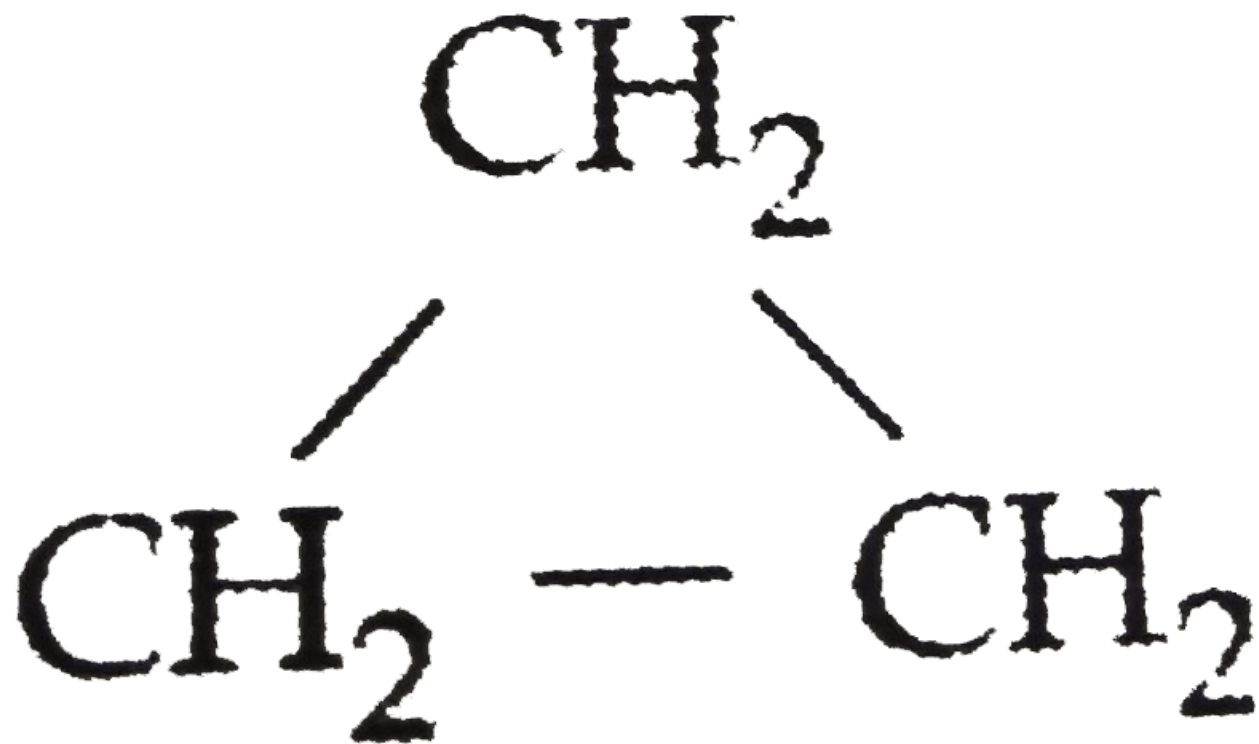
$\text{CH}_3\text{-(CH}_2\text{)}_4\text{-CH(CH}_3\text{)-CH(CH}_3\text{)-CH}_2\text{-CH}_2\text{-CH}_2\text{-CH}_3$

- A. 3, 4-Dimethyl-3-n-propylnonane
- B. 4-Ethyl-4, 5-dimethyldecane
- C. 6, 7-Dimethyl-7-n-propylnonane
- D. 6, 7-Dimethyl-7-ethyldecane

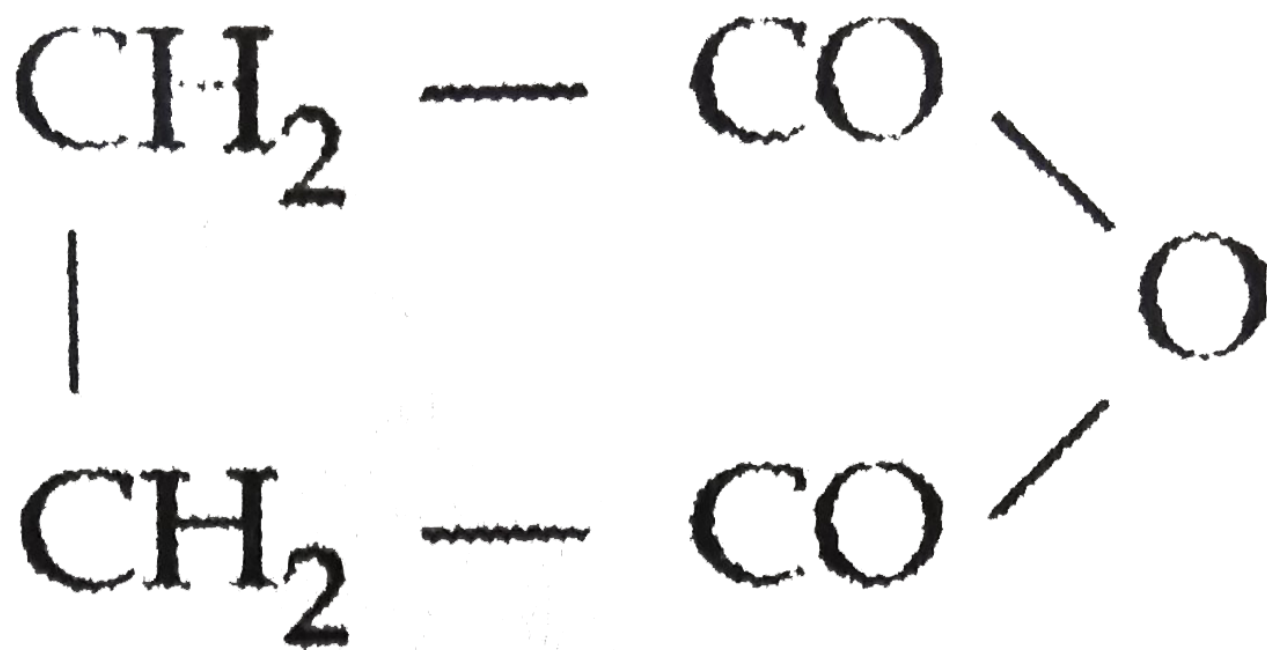
Answer: B

 [Watch Video Solution](#)

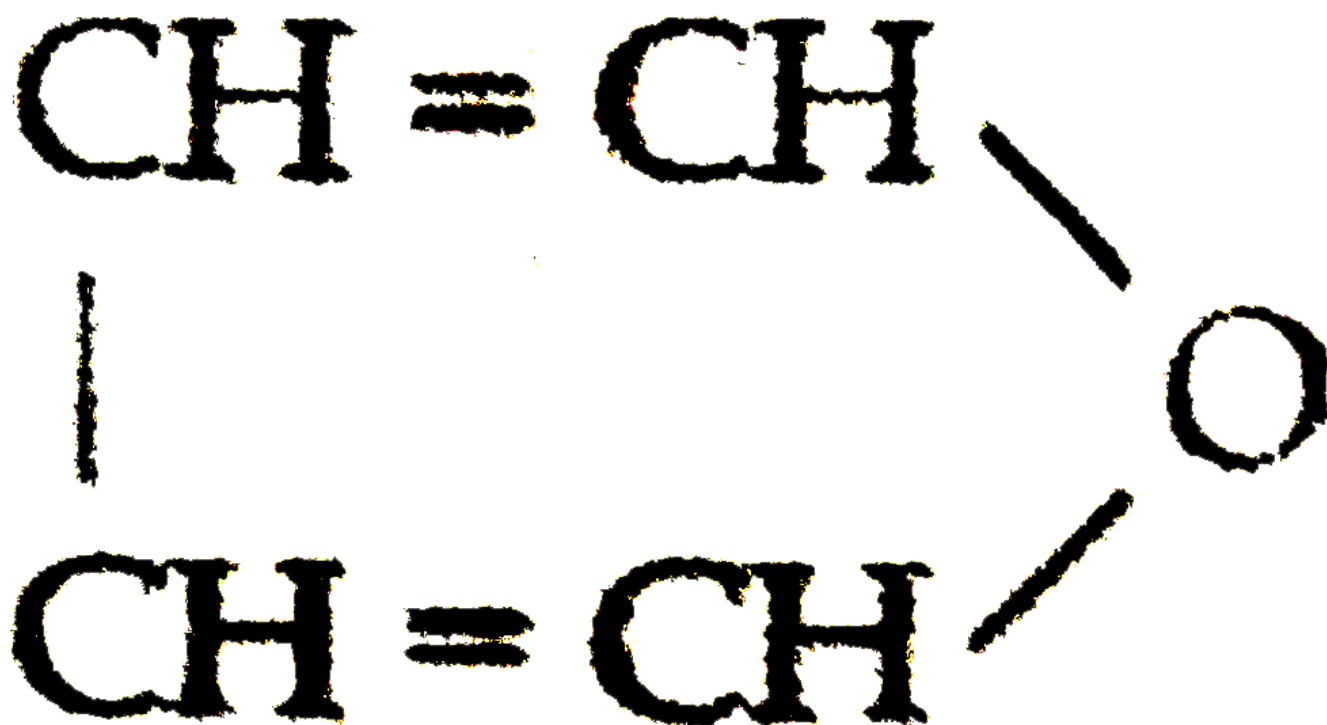
89. The structure representing a heterocyclic compound is :



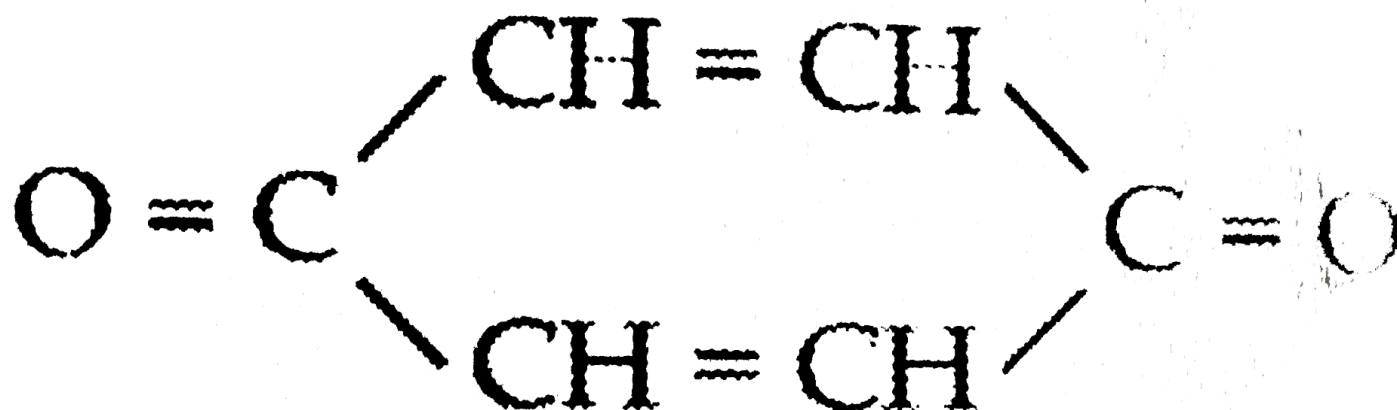
A.



B.



C.



D.

Answer: C

[▶ Watch Video Solution](#)

90. Neo-heptyl alcohol is correctly represented as

A. $\text{CH}_3\text{-overset{CH}_3\text{overset{()underset{CH}_3\text{underset{()C-}}$

$\text{underset{OH}\underset{()}\text{CH}\text{CH}_2\text{CH}_3\`$

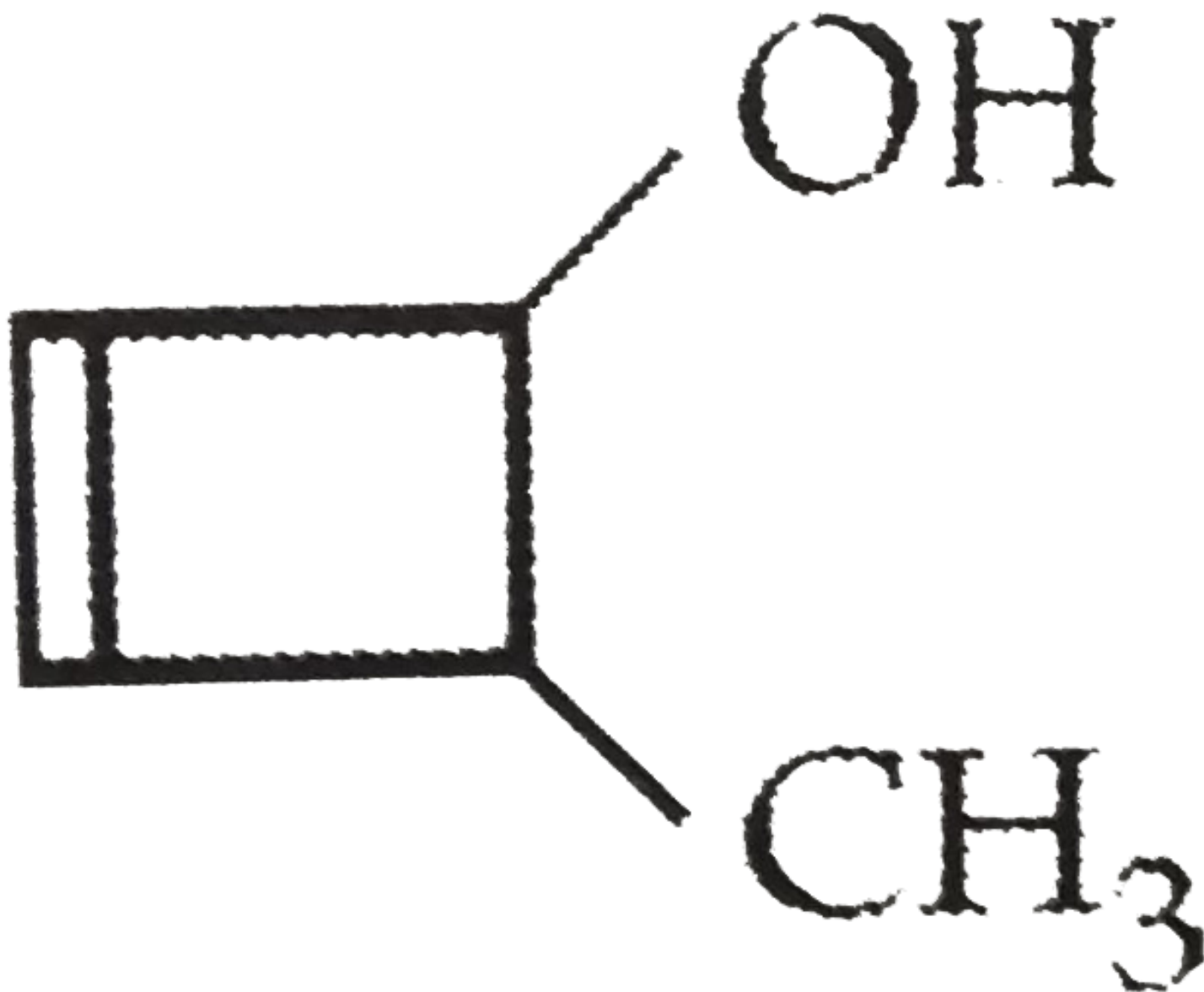
B. $\text{CH}_3\text{-overset{CH}_3\text{overset{()underset{CH}_3\text{underset{()C-CH}_2\text{CH}_2\text{CH}_2\text{CH}_3\`}$

C. $\text{CH}_3\text{-overset{CH}_3\text{overset{()underset{CH}_3\text{underset{()C-CH}_2\text{CH}_2\text{CH}_2\text{OH}\`}$

D. $\text{C}_2\text{H}_5\text{-overset{C}_2\text{H}_5\text{overset{()underset{C}_2\text{H}_5\text{underset{()C-OH}\`}$

Answer: C

 [Watch Video Solution](#)



- A. 3-Methylcyclo-1-buten-2-ol
- B. 4-Methylcyclo-2-buten-1-ol
- C. 4-Methylcyclo-1-buten-3-ol
- D. 2-methylcyclo-3-buten-1-ol

Answer: B

[▶ Watch Video Solution](#)

92. When potassium cyanate is heated, it gives

- A. Urea
- B. Methanamide
- C. Ethanamide
- D. Ethanamine

Answer: A

 [View Text Solution](#)

93. $\text{CH}_3\text{CH}_2\text{CH}_2\text{CH}(\text{CH}=\text{CH}_2)\text{CH}_2\text{CH}_2\text{CH}_3$ is

- A. 4-Ethenylheptane
- B. 3-n-propyl-1-hexene
- C. 4-Ethenylhexane
- D. 3-Ethenylheptane

Answer: B

 [View Text Solution](#)

94. The IUPAC name of

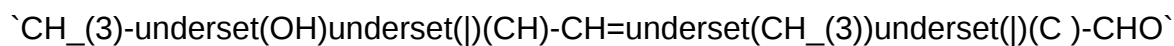
$\text{CH}_3\text{-underset{Cl}\underset{||}\text{C}=\underset{(\text{CH}_3)\underset{||}\text{C}\text{-underset{C}_2\text{H}_5\underset{||}\text{CH}}{\text{CH}}\text{-CH}_2\text{-C}=\text{CH}$ is

- A. 6-Chloro-4-ethyl-5-methylhept-5-en-1-yne
- B. 6-Chloro-4-ethyl-5-methylhept-1-yn-5-ene
- C. 2-Chloro-4-ethyl-3-methylhept-2-en-6-yne
- D. 2-Chloro-4-ethyl-3-methylhept-6-yn-2-ene

Answer: D

 [Watch Video Solution](#)

95. The `IUPAC` name of



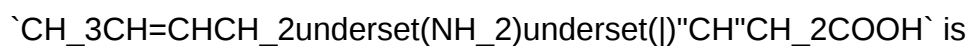
is

- A. 4-Hydroxy-1-methylpentanal
- B. 4-Hydroxy-2-methylpent-2-en-1-al
- C. 2-Hydroxy-4-methylpent-3-en-5-al
- D. 2-Hydroxy-3-methylpent-2-en-5-al

Answer: B

 [Watch Video Solution](#)

96. The IUPAC name of the compound



A. 5-Oxo-4-hydroxy-2-pentanone

B. 4-Hydroxy-5-al-2-pentanone

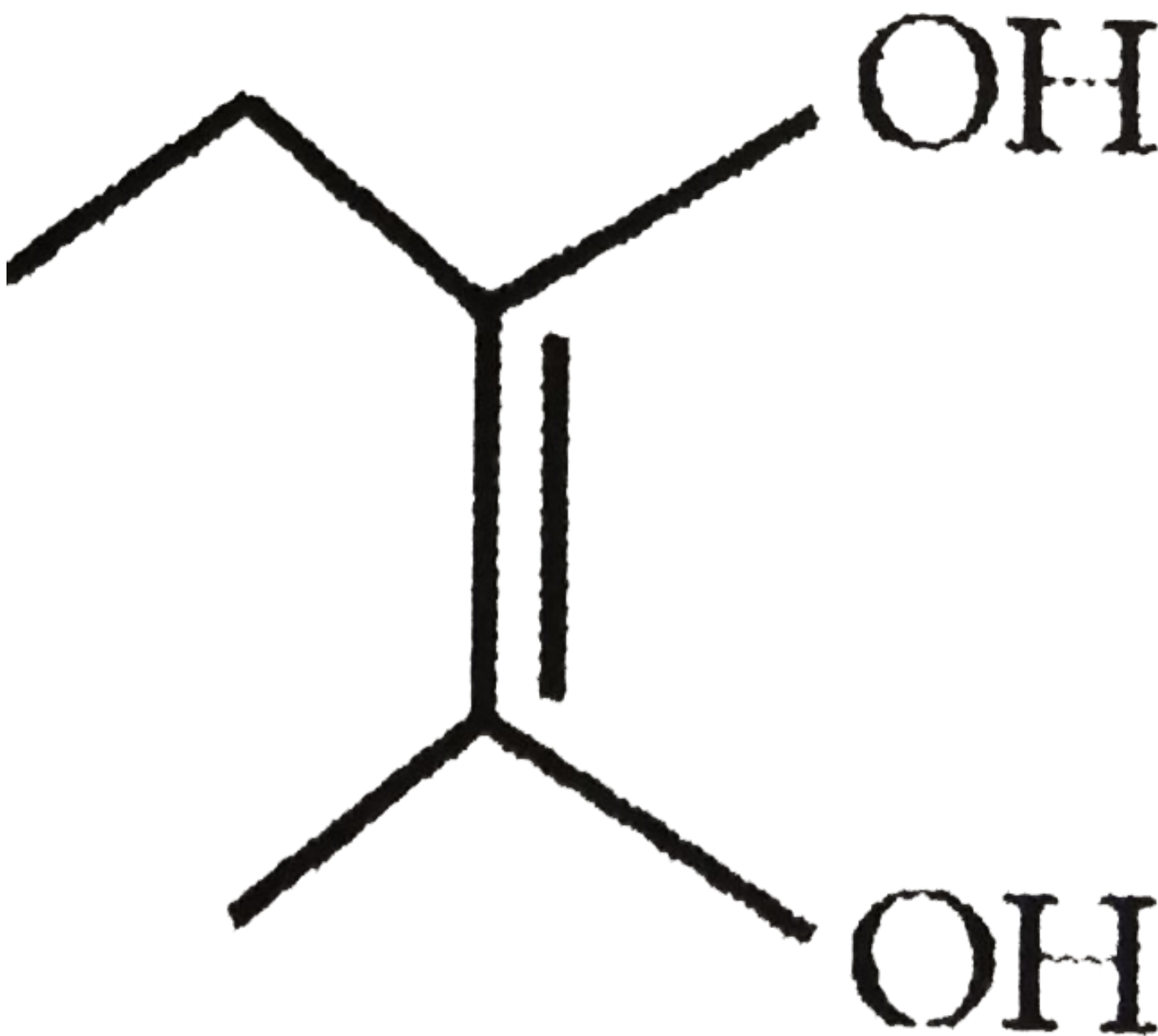
C. 2-Hydroxy-4-oxopentanal

D. 1-al-4-oxo-2-pentanol

Answer: C

 [Watch Video Solution](#)

99. The IUPAC name of



- A. But-2-ene-2, 3-diol
- B. Pent-2-ene-2, 3-diol
- C. 2-Methylbut-2-ene-2, 3-diol
- D. Hex-2-ene-2, 3-diol

Answer: B

 [Watch Video Solution](#)

100. The given compound in IUPAC may be called,



- A. Diacetone
- B. Acetoneamine
- C. Diacetoneamine
- D. 4-Amino-4-methylpentan-2-one

Answer: D

[▶ Watch Video Solution](#)

101. What is the IUPAC name of the following compound?



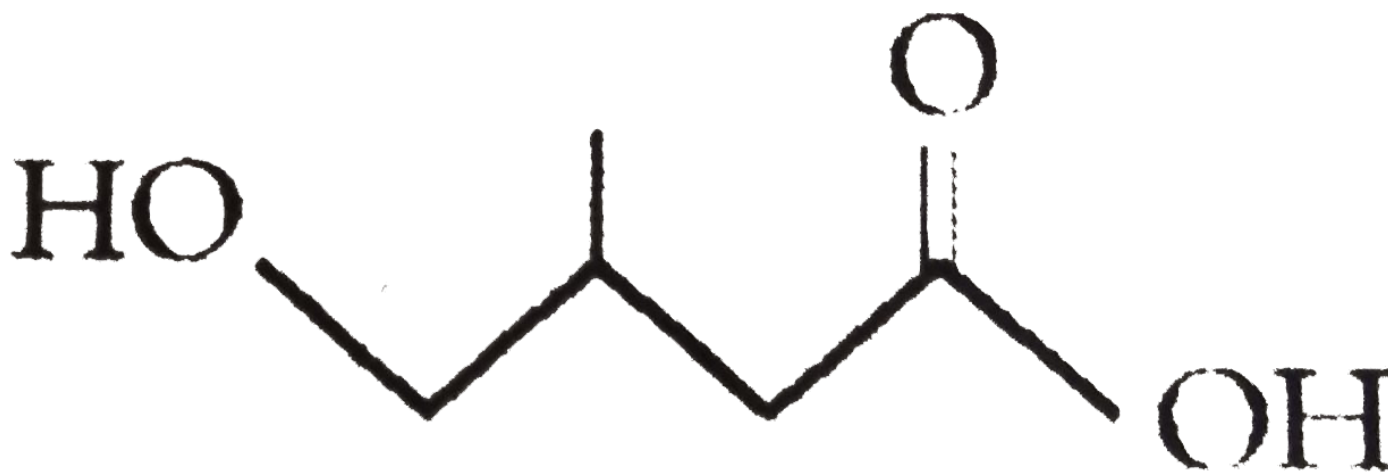
- A. 2-Methyl-4-hexanamine

- B. 5-Methyl-3-hexanamine
- C. 2-Methyl-4-amino hexane
- D. 5-Methyl-3-amino hexane

Answer: B

[▶ Watch Video Solution](#)

102. The IUP AC name of the following compound.



- A. 4-Hydroxy-3-methyl butanoic acid
- B. 1-Hydroxy-2-methyl butanoic acid
- C. 3-Hydroxy-2-methyl butanoic acid
- D. 3-(Hydroxymethyl) butanoic acid

Answer: A

[▶ Watch Video Solution](#)

103. The systematic name of $\text{CH}_3\text{-CHBr-CH}_2\text{OH}$ is

- A. 3-Hydroxy-2-bromopropane
- B. 2-Bromopropanol-1
- C. 2-Bromo-3-propanol
- D. 3-Hydroxy isopropyl bromide

Answer: B

 [Watch Video Solution](#)

104. The correct IUPAC name of $\text{CH}_3\text{CH(OH)CH}_2\text{CH}_2\text{COOH}$ is

- A. 4-Hydroxy pentanoic acid
- B. 1-Carboxy-3-butanoic acid
- C. 1-Carboxy-4-butanol
- D. 4-Carboxy-2-butanol

Answer: A

 [Watch Video Solution](#)

105. IUPAC name of the compound is

$\text{CH}_3\text{-CH}_2\text{-CH(CH}_2\text{CH}_2\text{CH}_2\text{CH}_3\text{)-CH}_2\text{CH(OH)-CH}_3$ is

- A. 4-Ethyl-2-pentanol

- B. 4-Methyl-2-hexanol
- C. 2-Ethyl-2-pentanol
- D. 3-Methyl-2-hexanol

Answer: B

 [View Text Solution](#)

106. IUPAC name of the compound is $\text{CH}_3\text{-CH}=\text{CH-CH}_2\text{-CH}_2\text{-CH}_3$

- A. 2-Ethyl-2-butene
- B. 3-Ethyl-2-butene
- C. 3-Methyl-3-pentene
- D. 3-Methyl-2-pentene

Answer: C

 [View Text Solution](#)

107. IUPAC name of $(\text{CH}_3)_2\text{CH-CH=CH-CH}_3$ is

- A. 2-Methyl-3-pentene
- B. 4-Methyl-2-pentene
- C. 1, 2-Isopropyl-1-propene
- D. 3-Isopropyl-2-propene

Answer: A

 [Watch Video Solution](#)

108. Freon-114 used in refrigerator and air conditioners is 1, 2-dichlorotetrafluoroethane. Its structural formula is

- A. $\text{Cl}-\text{C}(\text{Cl})(\text{F})-\text{C}(\text{F})-\text{H}$
- B. $\text{C}(\text{Cl})(\text{H})-\text{F}-\text{C}(\text{Cl})(\text{F})-\text{C}-\text{F}$
- C. $\text{F}-\text{C}(\text{F})(\text{Cl})-\text{C}(\text{F})(\text{Cl})-\text{C}-\text{Cl}$
- D. $\text{F}-\text{C}(\text{Cl})(\text{F})-\text{C}(\text{H})(\text{Cl})-\text{C}(\text{F})(\text{F})-\text{C}-\text{F}$

Answer: C

 [Watch Video Solution](#)

109. IUPAC name of $\text{CH}_3-\text{CH}_2-\text{CH}_2-\text{CH}(\text{CH}_3)-\text{NH}_2$ is

- A. 1-Methyl-1-aminopropane
- B. 2-aminobutane
- C. 2-Methyl-3-aminopropane
- D. None of the above

Answer: B

 [View Text Solution](#)

110. IUPAC name of $\text{CH}_3\text{-CH}_2\text{-CH}(\text{CH}_3)\text{-CH}=\text{CH}_2$ is

- A. 2-Methyl pentene
- B. 4-Methyl pentene-1
- C. 1-Hexene
- D. 2-Methyl pentene-1

Answer: B

 [View Text Solution](#)

111. The IUPAC name of $\text{CH}_3\text{-CH}_2\text{-CH}(\text{CH}_3)\text{C}=\text{CH}_2$ is

- A. 2-Methylbutene-1
- B. 3-Methylbutene-1
- C. Vinyl methylethane
- D. Propylethene-1

Answer: A

 [View Text Solution](#)

112. The IUPAC name of $\text{CH}_3\text{C}=\text{CCH}(\text{CH}_3)_2$ is

- A. 4-Methyl-2-pentyne
- B. 4, 4-dimethyl-2-butyne
- C. Methyl isopropyl acetylene
- D. 2-Methyl-4-pentyne

Answer: A

 [Watch Video Solution](#)

113. The IUPAC name of the compound having structure

$\text{C}_2\text{H}_5\text{-CH}_2\text{-CH=C(CH}_3\text{)-CH}_3$ is

- A. 3-Methyl-2-ethyl but-1-ene
- B. 2-Ethyl-3-methyl but-1-ene
- C. 3-Ethyl-3-methyl but-1-ene
- D. Ethyl isopropyl ethene

Answer: B

 [View Text Solution](#)

114. The I.U.P.A.C. name of $\text{C}_2\text{H}_5\text{-CH}_2\text{-CH}_2\text{-CH}_2\text{-OH}$ is

- A. 2-Ethyl butanol-1
- B. 2-Methyl pentanol-1

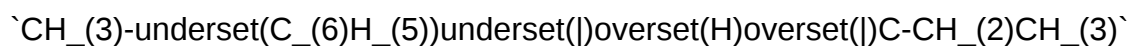
C. 2-Ethyl pentanol-1

D. 3-Ethyl butanol-1

Answer: A

 [Watch Video Solution](#)

115. IUPAC name of the following compound is



A. 2-Cyclohexylbutane

B. 2-Phenylbutane

C. 3-Cyclohexylbutane

D. 3-Phenylbutane

Answer: B

 [View Text Solution](#)

116. $\text{CH}_3\text{-}\underset{\text{(OH)}}{\underset{|\text{}}{\text{CH}}}\text{-CH}_2\text{-}\underset{\text{(CH}_3\text{)}}{\underset{|\text{}}{\text{CH}}}\text{-CHO$

A. 4-Hydroxy-1-methylpentanal

B. 4-Hydroxy-2-methylpentanal

C. 3-Hydroxy-2-methylpentanal

D. 3-Hydroxy-3-methyl 1 pentanal

Answer: B

 [Watch Video Solution](#)

117. What is the correct IUPAC name for

$\text{CH}_3\text{-CH}_2\text{-CH}(\text{CH}_3)\text{-CH}(\text{H})\text{-CH}(\text{O})\text{-CH}_2\text{-COOH}$?

- A. 5-Methyl-3-hexenoic acid
- B. 5-Carboxyl-2-methylpentene
- C. 4-Isopropyl-3-butenoic acid
- D. None of above

Answer: A

 [View Text Solution](#)

118. The IUPAC name of

$\text{CH}_3\text{-CH}_2\text{-CH}=\text{CH}-\text{CH}_2\text{-CH}_2\text{-OH}$ will be

- A. 2-Methyl pentyl alcohol
- B. 4-Methyl-3-pentene-ol
- C. 2-Methyl pent-2-ene-1-ol
- D. 4-Methyl pentyl alcohol

Answer: B

 [View Text Solution](#)

119. The structure of 4-methyl pent-2-ene is

- A. $(\text{CH}_3)_2\text{CH}-\text{CH}_2\text{CH}=\text{CH}_2$
- B. $(\text{CH}_3)_2\text{CH}-\text{CH}=\text{CH}-\text{CH}_3$
- C. $(\text{CH}_3)_2\text{CH}-\text{CH}_2\text{CH}=\text{CH}-\text{CH}_3$
- D. $(\text{CH}_3)_2\text{C}=\text{CHCH}_2\text{CH}_3$

Answer: B

 [View Text Solution](#)

120. 2-Methyl-2-butene will be represented as

- A. $\text{CH}_3-\underset{(\text{CH}_3)}{\text{C}}-\text{CH}_2-\text{CH}_3$
- B. $\text{CH}_3-\underset{(\text{CH}_3)}{\text{C}}=\text{CH}-\text{CH}_3$
- C. $\text{CH}_3-\text{CH}_2-\overset{(\text{CH}_3)}{\text{C}}=\text{CH}_2$
- D. $\text{CH}_3-\underset{(\text{CH}_3)}{\text{C}}-\text{CH}=\text{CH}_2$

Answer: B

 [View Text Solution](#)

121. The IUPAC of $\text{CH}_2=\text{CH}-\text{CH}_2\text{Cl}$ is

- A. Allyl chloride
- B. 1-Chloro-3-propene
- C. Vinyl chloride
- D. 3-Chloro-1-propene

Answer: D

 [View Text Solution](#)

122. IUPAC name of the compound

$\text{CH}_2=\text{CH}-\text{CH}_2-\text{CH}_2\text{OH}$ is

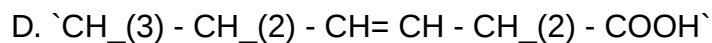
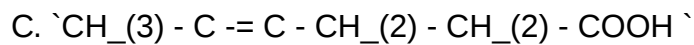
- A. 1-Buten-4-ol
- B. 3-Buten-1-ol
- C. 4-Hydroxy-1-butene
- D. 1-Butenol-4

Answer: A

 [Watch Video Solution](#)

123. Which is the correct structure of the compound 3-hexyn-1-oic acid ?

- A. $\text{CH}_3-\text{CH}_2-\text{CH}_2-\text{C}\equiv\text{C}-\text{COOH}$
- B. $\text{CH}_3-\text{CH}_2-\text{C}\equiv\text{C}-\text{CH}_2-\text{COOH}$



Answer: B

 [Watch Video Solution](#)

124. The IUPAC name of the compound having the formula $\text{CCl}_3\text{CH}_2\text{CHO}$ is

A. 3, 3, 3-Trichloropropanal

B. 1, 1, 1-Trichloropropanal

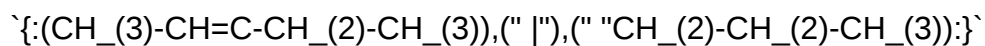
C. 2, 2, 2-Trichloropropanal

D. Chloral

Answer: A

 [Watch Video Solution](#)

125. IUPAC name of the following compound will be



A. 3-Ethyl-2-hexene

B. 3-Propyl-2-hexene

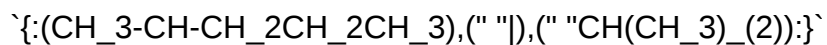
C. 3-Propyl-3-hexene

D. 4-Ethyl-4-hexene

Answer: A

 [Watch Video Solution](#)

126. The IUPAC name of the following compound is



- A. 2-Isopropylpentane
- B. 2, 3-Dimethylhexane
- C. Isononane
- D. 2, 4-Dimethylhexane

Answer: B

 [Watch Video Solution](#)

127. The IUPAC name of $\text{CH}_3\text{-CH(OH)-CH}_2\text{-CH}_2\text{-CH(Cl)-CH}_2\text{-CH}_3$ is

- A. 5-Chloro-5-hydroxyhex-2-ene
- B. 2-Chloro-5-hydroxyhexene
- C. 2-Chloro-2-hydroxy-5-hexene
- D. 2-Chloro-4-hexenol -2

Answer: A

 [Watch Video Solution](#)

128. The IUPAC name of

$\text{CH}_3\text{-CH=CH-C}\equiv\text{CH}$ is

- A. Pent-2-en-4-yne
- B. Pent-3-en-1-yne
- C. Pent-3-yne-1-en
- D. Pent-2-yne-1-en

Answer: A

 [Watch Video Solution](#)

129. IUPAC name of $\text{CH}_3\text{-CH}_2\text{-CH}_2\text{-CH}_2\text{-CH}_2\text{-CH}_2\text{-CH}_2\text{-CH}_2\text{-CH}_2\text{-CH}_2\text{-CH}_3$ is

- A. 2-Butyl-2-methyl-3-ethylbutane
- B. 2-Ethyl-3, 3-dimethylheptane
- C. 3, 4, 4-Trimethylheptane
- D. 3, 4, 4-Trimethyloctane

Answer: D

 [Watch Video Solution](#)

130. Which is the IUPAC name of $\text{CH}_3\text{-CH}_2\text{-CH}_2\text{-CH}_2\text{-CH}_2\text{-CH}_2\text{-Cl}$?

- A. 1-Chloro-2, 2-diethylpropane
- B. 3-Chloro-2, 2-diethylpropane
- C. 1-Chloro-2-ethyl-2-methylbutane
- D. 1-Chloro-2, 2-diethyl-2-methylethane

Answer: C

 [Watch Video Solution](#)

131. The IUPAC name of the compound $\text{CHO-(CH}_2)_4\text{-COOH}$

- A. Hexan-1-al-6-oic acid
- B. 6-Formyl-hexanoic acid
- C. Hexanal-1-carboxylic acid
- D. Hexanoic acid -5-al-1

Answer: B

 [Watch Video Solution](#)

132. The IUPAC name of $\text{CH}_3\text{-CH=CH-COOH}$ is:

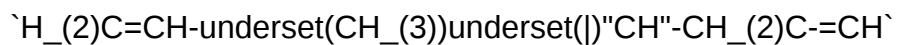
- A. 2-Butenoic acid

- B. 1-Butenoic acid
- C. 3-Butenoic acid
- D. 1-Carboxy-1-propene

Answer: A

 [Watch Video Solution](#)

133. The correct IUPAC name of

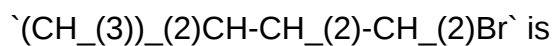


- A. 3-Methyl-1-hexen-5-yne
- B. 4-Methyl-5-hexen-1-yne
- C. 4-(Ethenyl)-1-pentyne
- D. 3-(2-propenyl) butene-1

Answer: A

 [Watch Video Solution](#)

134. The IUPAC name of



- A. 1-Bromo pentane
- B. 2-Methyl-4-bromo butane

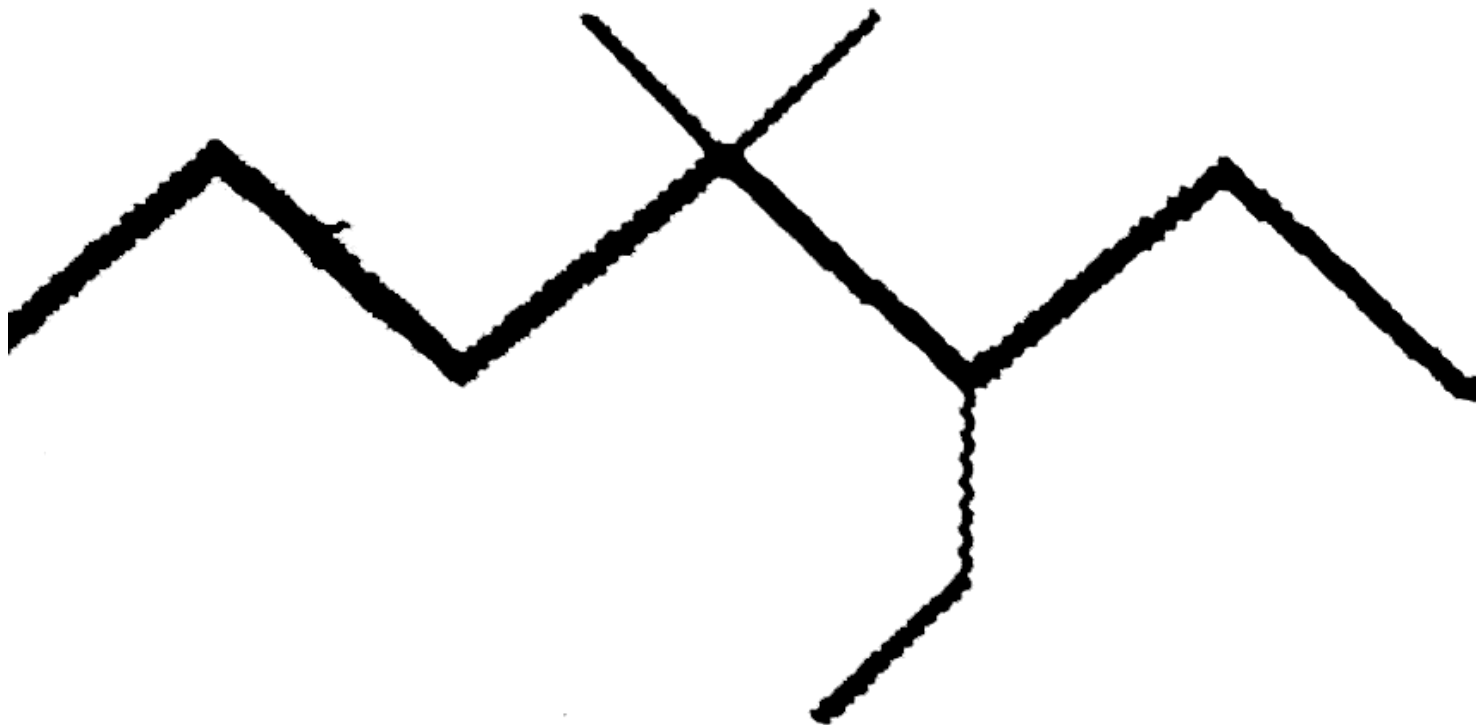
C. 1-Bromo-3-methyl butane

D. 2-Methyl-3-bromo butane

Answer: C

[▶ Watch Video Solution](#)

135. The IUPAC name of



is

A. 1, 1-Diethyl-2, 2-dimethylpentane

B. 4, 4-Dimethyl-5, 5-diethylpentane

C. 5, 5-Diethyl-4, 4-dimethylpentane

D. 3-Ethyl-4, 4-dimethylheptane

Answer: D

 [Watch Video Solution](#)

136. The IUPAC name of compound $\text{CH}_3\text{-C}(\text{CH}_3)_2\text{-CH}_2\text{-CH}=\text{CH}_2$ is

- A. 2, 2-Dimethyl pent-4-ene
- B. 2, 2-Dimethyl-2-pentene
- C. 1, 1, 1-Trimethyl but-3-ene
- D. 4, 4-Dimethyl pent-1-ene

Answer: D

 [Watch Video Solution](#)

137. Which of the following alkanes contain primary, secondary, tertiary and quaternary carbon atoms together

- A. $(\text{CH}_3)_3\text{CH}$
- B. $(\text{C}_2\text{H}_5)_3\text{CH}$
- C. $(\text{CH}_3)_3\text{C-CH}_2\text{CH}(\text{CH}_3)_2$
- D. $(\text{CH}_3)_4\text{C}$

Answer: C

 [Watch Video Solution](#)

138. The number of tertiary carbon atoms in the compound $(\text{CH}_3)_2\text{CHCH}_2\text{C}(\text{CH}_3)_3$ is

- A. 2
- B. 3
- C. 1
- D. 4

Answer: C

 [Watch Video Solution](#)

139. The compound which has one isopropyl group is

- A. 2, 2, 3, 3-Tetramethyl pentane
- B. 3, 3-Dimethyl pentane
- C. 2, 2, 3-Trimethyl pentane
- D. 2-Methyl pentane

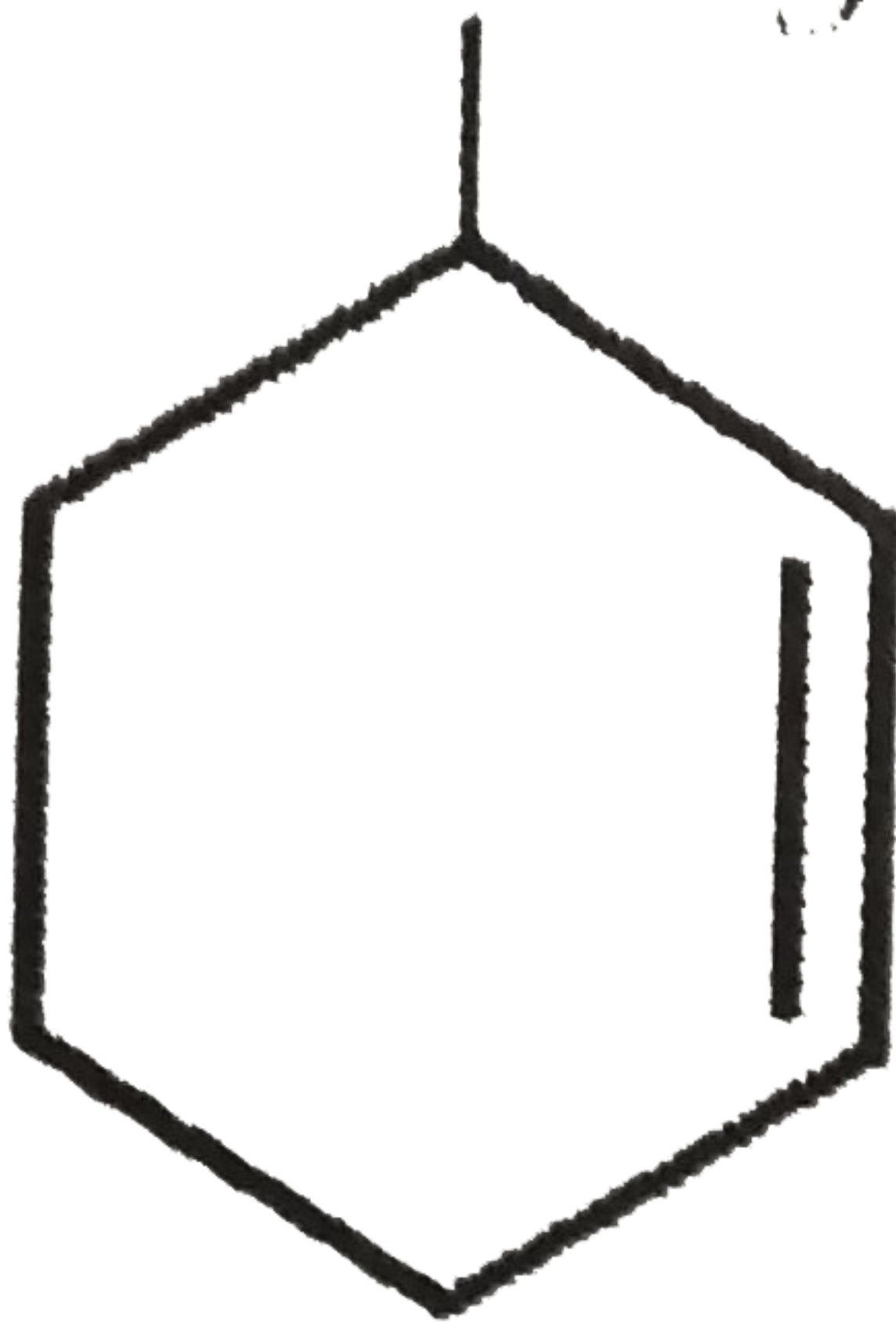
Answer: D

 [Watch Video Solution](#)

140. The IUPAC name of

$\text{CH}_3\text{-CH}(\text{OH})\text{-CH}(\text{CH}_3)\text{-CH}_2\text{-CH}_2\text{-CH}_2\text{-CH}(\text{Br})\text{-CH}_2\text{-CH}_2\text{-CH}_2\text{-CH}(\text{Br})\text{-CH}_3$

0113



A. 3-Methyl cyclohexene

B. 1-Methyl cyclohex-2-ene

C. 6-Methyl cyclohexene

D. 1-Methyl cyclohex-5-ene

Answer: A

 [Watch Video Solution](#)

143. The IUPAC name of $\text{CH}_3\text{C}=\text{CCH}(\text{CH}_3)_2$ is

A. 4-Methyl-2-pentyne

B. 4, 4-Dimethyl-2-butyne

C. Methyl isopropyl acetylene

D. 2-Methyl-4-pentyne

Answer: A

 [Watch Video Solution](#)

144. The IUPAC name of the molecule

$\text{CH}_3\text{-O-C(=O)-CH}_2\text{-C(=O)-CH}_2\text{-C(=O)-OH}$ is

A. 4-Oxo-2, 3-dimethylpent-2-en-1-oic acid

B. 2-Carboxy-3-methylpent-2-en-3-one

C. 4-Carboxy-3-methylpent-3-en-2-one

D. 2, 3-Dimethyl--4-oxo-pent-2-en-1-oic acid

Answer: D

 [Watch Video Solution](#)

145. The name of $\text{Cl-CH}_2\text{-underset(Br)underset{||}(C)=underset(Br)underset{||}(C)\text{-CH}_2\text{-Cl}$ according to the `IUPAC` nomenclature system is

- A. 2, 3-Dibromo-1, 4-dichlorobutene-2
- B. 1, 4-Dichloro-2,3-bromobutene-2
- C. 1, 4-Dichloro-2,3-bromobutene-2
- D. Dichlorodibromobutane

Answer: B

 [Watch Video Solution](#)

146. The names of some compounds are given. Which one not in the `IUPAC` system?

- A. $\text{CH}_3\text{-underset(OH)underset{||}{}'\text{CH}'\text{-underset(CH}_3\text{)underset{||}{}'\text{CH}'\text{-CH}_3$
3-Methyl-2-butanol
- B. $\text{CH}_3\text{-C=C-CH(CH}_3\text{)}_2$
4-Methyl-2-pentyne

C. $\text{CH}_3\text{-CH}_2\text{-CH}_2\text{-C(CH}_3)_2\text{-CH}_3$

2-Ethyl-3-methyl-but-1-ene

D. $\text{CH}_3\text{-CH}_2\text{-CH}_2\text{-CH}_2\text{-CH}_2\text{-CH}_2\text{-CH}_3$

CH₂CH₃

3-Methyl-4-ethyl heptane

Answer: D

 [Watch Video Solution](#)

147. The IUPAC name of the compound

$\text{CH}_3\text{-CH}_2\text{-OCH}_2\text{-CH}_2\text{-OH}$

A. 2-Methoxy-1-butanol

B. 3-Methoxy-1-butanol

C. 2-Methoxy-1-butanal

D. 1,2-Methoxy-butanol

Answer: A

 [Watch Video Solution](#)

148. IUPAC name of $\text{CH}_3\text{CH}_2\text{C(Br)=CH-Cl}$ is

A. 2-Bromo-1-chloro butene

- B. 1-Chloro-2-bromo butene
- C. 3-Chloro-2-bromo butene
- D. None of the above

Answer: A

 [Watch Video Solution](#)

149. The IUP AC name of

$\text{CH}_3\text{-CH(OH)-CH}_2\text{-CH(OH)-CH}_3$ and $\text{CH}_3\text{-CH(CN)-CH}_2\text{-CH(CN)-CH}_3$

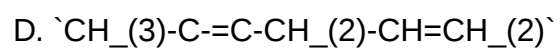
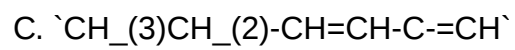
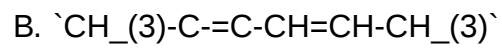
- A. 1, 1-Dimethyl-1, 3-butanediol and propanetricarbyl amine
- B. 4-Methyl-2, 4-pentanediol and 1, 2, 3- propanetrinitrile
- C. 2-Methyl-2, 4-pentanediol and propane 1, 2, 3- tricarboni trile
- D. 1, 3, 3-Trirnethyl-1, 3-propanediol and 1, 2, 3- tricyano propane

Answer: C

 [Watch Video Solution](#)

150. Hexa-2-ene-4-yne is

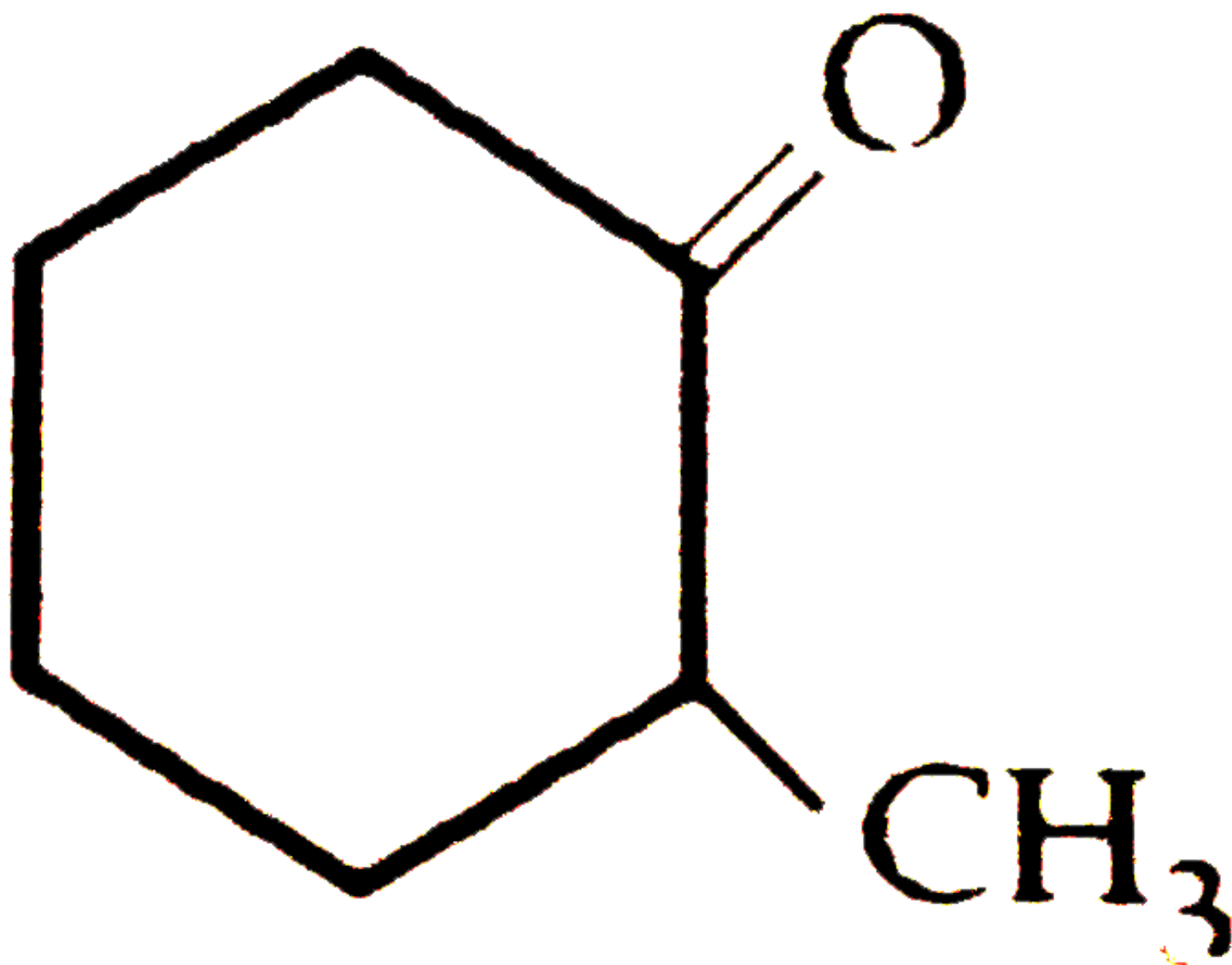
- A. $\text{CH}_3\text{-CH}_2\text{-C}\equiv\text{C-CH=CH}_2$



Answer: B

 [Watch Video Solution](#)

151. IUPAC name of the compound



A. α -Methyl cyclohexanone

B. 2-Methyl cyclohexanone

C. Heptanone-2

D. Methyl cyclohexanone

Answer: B

 [Watch Video Solution](#)

152. IUPAC name of $\text{CH}_2=\text{CH}-\text{CH}(\text{CH}_3)\text{CH}_2\text{C}(\text{Br})=\text{CH}_2$ is

- A. 4-Bromo-3-ethyl-1, 4-pentadiene
- B. 2-Bromo-3-ethyl-1, 4-pentadiene
- C. 2-Bromo-3-ethyl-1, 5-pentadiene
- D. None of these

Answer: B

 [Watch Video Solution](#)

153. IUPAC name of

$\text{H}_3\text{C}-\text{C}(\text{C}_2\text{H}_5)\text{CH}(\text{OH})\text{CH}_2\text{CH}_2\text{Cl}$

- A. 1-Chloro-4-methyl-2-hexanal
- B. 2-Chloro-4-ethyl-2-pentanol
- C. 1-Chloro-4-methyl-2-hexanol
- D. 1-Chloro-2-hydroxy-4-methyl hexane

Answer: C

 [Watch Video Solution](#)

154. The IUPAC name of

$(\text{CH}_3)_2\text{C}=\text{CH}_2$ is

- A. 3, 3, 3-Trirnethyl-1-propene
- B. 1, 1, 1-Trimethyl-2-propene
- C. 3, 3-Dimethyl-1-butene
- D. 2, 2-Dimethyl-3-butene

Answer: C

 [Watch Video Solution](#)

155. The IUPAC name of $\text{CH}_3\text{COCH}(\text{CH}_3)_2$ is

- A. Isopropylmethyl ketone
- B. 2-Methyl-3-butanone
- C. 4-Methylisopropyl ketone
- D. 3-Methyl-2-butanone

Answer: D

 [Watch Video Solution](#)

156. What will be the IUPAC name of given compound?

$\text{CH}_3\text{CH}_2\text{CH}_2\text{CH}(\text{CH}_3)\text{CH}_2\text{CH}_2\text{CH}_3$

B. 3-Ethyl pentene-1

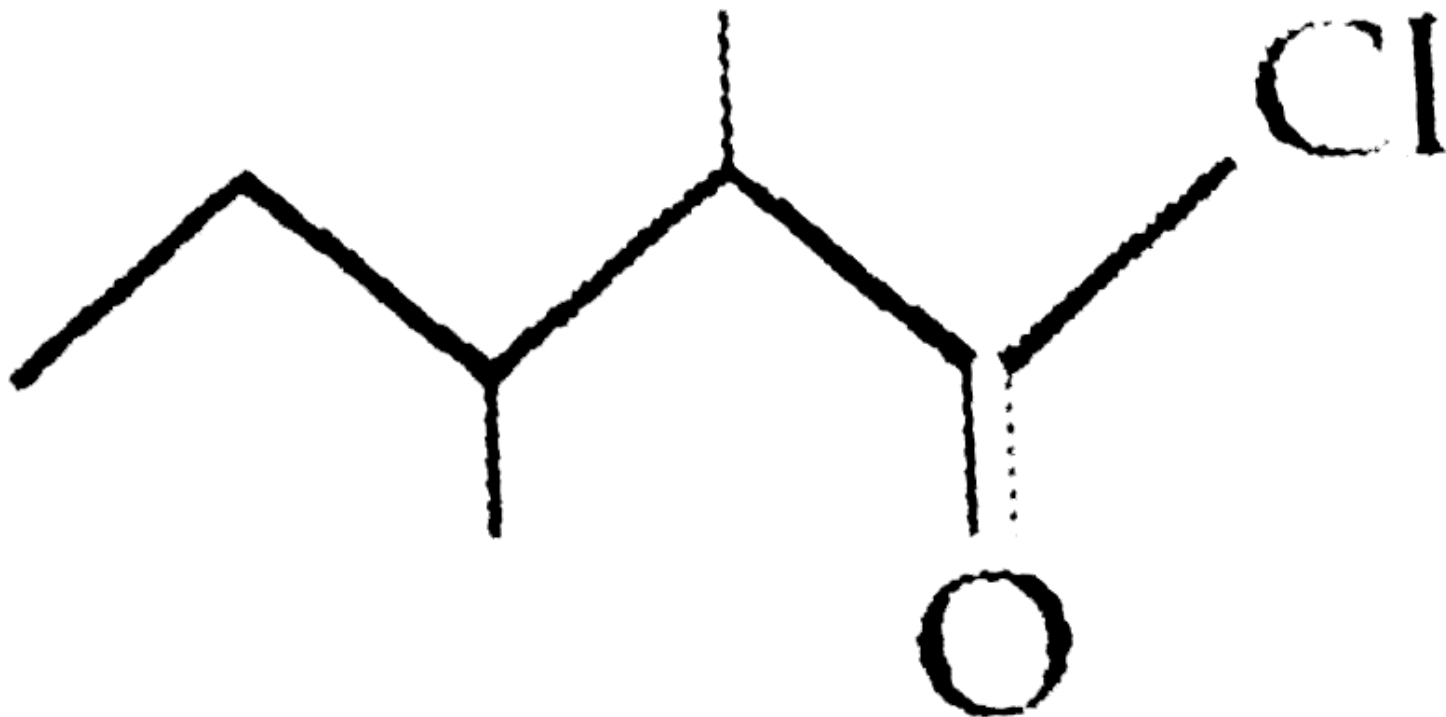
C. 4-Ethyl hexene-1

D. 3-Ethyl hexene-1

Answer: D

 [Watch Video Solution](#)

159. The IUPAC name of



is

A. 2-Ethyl-3-methylbutanoyl chloride

B. 2, 3-Dimethylpentanoyl chloride

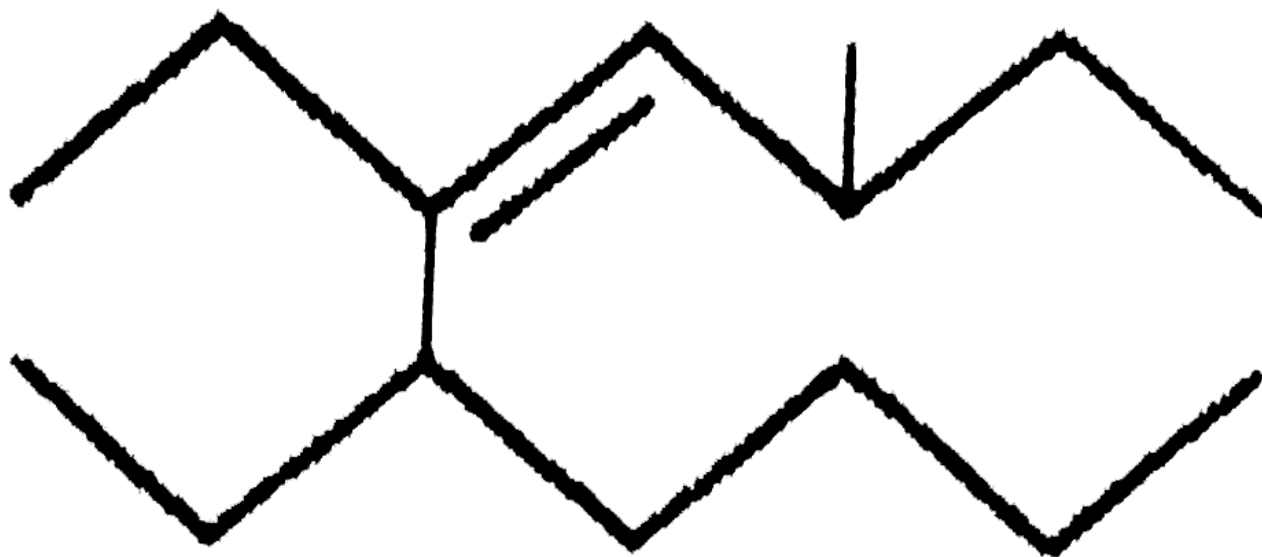
C. 3, 4-Dimethylpentanoyl chloride

D. 1-Chloro-1-oxo-2, 3-dimethylpentane

Answer: B

[Watch Video Solution](#)

160. Consider the following compound



The IUPAC name of this compound is

- A. 5, 6-Diethyl-3-methyl decane
- B. 5, 6-Diethyl-3-methyl dec-4-ene
- C. 3, 5, 6-Trimethyl-dec-6-ene
- D. 3, 5, 6-Triethyl-dec-4-ene

Answer: B

[Watch Video Solution](#)

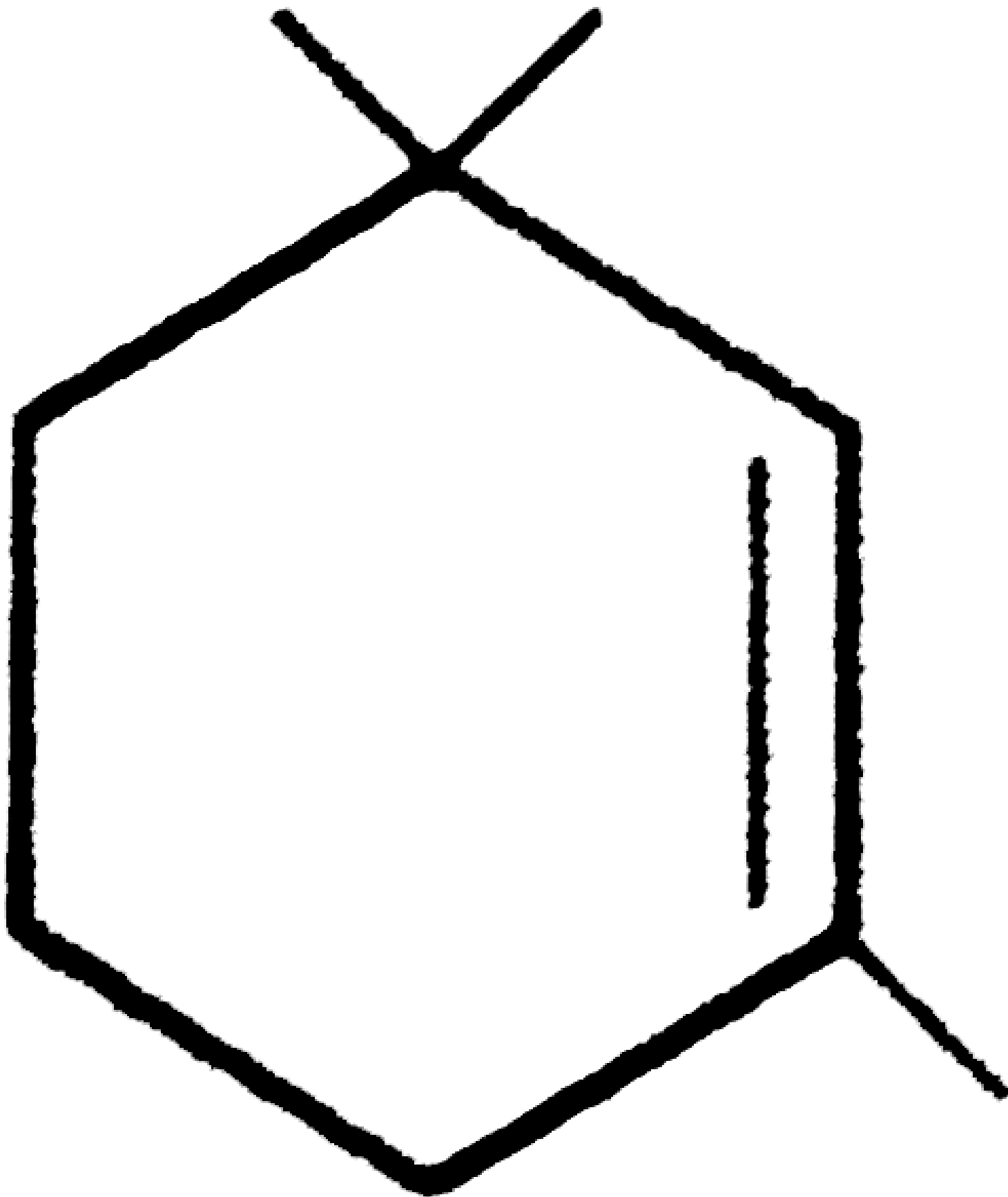
161. The correct decreasing order of priority for the functional groups of organic compounds in the IUPAC system of nomenclature is

- A. $\text{-SO}_3\text{H}, \text{-COOH}, \text{-CONH}_2, \text{-CHO}$
- B. $\text{-CHO}, \text{-COOH}, \text{SO}_3\text{H}, \text{-CONH}_2$
- C. $\text{-CONH}_2, \text{-CHO}, \text{-SO}_3\text{H}, \text{-COOH}$
- D. $\text{-COOH}, \text{-SO}_3\text{H}, \text{-CONH}_2, \text{-CHO}$

Answer: A

 [Watch Video Solution](#)

162. Give the IUPAC name of the compound



A. 1, 1, 3-Trimethylcyclohex -2-ene

B. 1, 3, 3-Trimethylcyclohex-1-ene

C. 1, 1, 5-Trimethylcyclohex-5-ene

D. 2, 6, 6-Trimethylcyclohex-1-ene

Answer: B

 [Watch Video Solution](#)

163. The correct structure of 4 - bromo - 3 - methyl but - 1 - ene is

A. $\text{Br-CH=C(CH}_3\text{)}_2$

B. $\text{CH}_2\text{=CH-CH(CH}_3\text{)-CH}_2\text{Br}$

C. $\text{CH}_2\text{=C(CH}_3\text{)CH}_2\text{CH}_2\text{Br}$

D. $\text{CH}_3\text{-C(CH}_3\text{)=CHCH}_2\text{-Br}$

Answer: B

 [Watch Video Solution](#)

164. The IUPAC name of $\text{CH}_3\text{-C(CH}_3\text{)(CH}_2\text{)-C(=O)-CH}_2\text{CH}_2\text{OH}$ is

A. 1-Hydroxy-4-methyl pentan-3-one

B. 2-Methyl-5-hydroxy pentan-3-one

C. 4-Methyl-3-oxopentan-1-ol

D. Hexan-1-ol-3-one

Answer: A

 [Watch Video Solution](#)

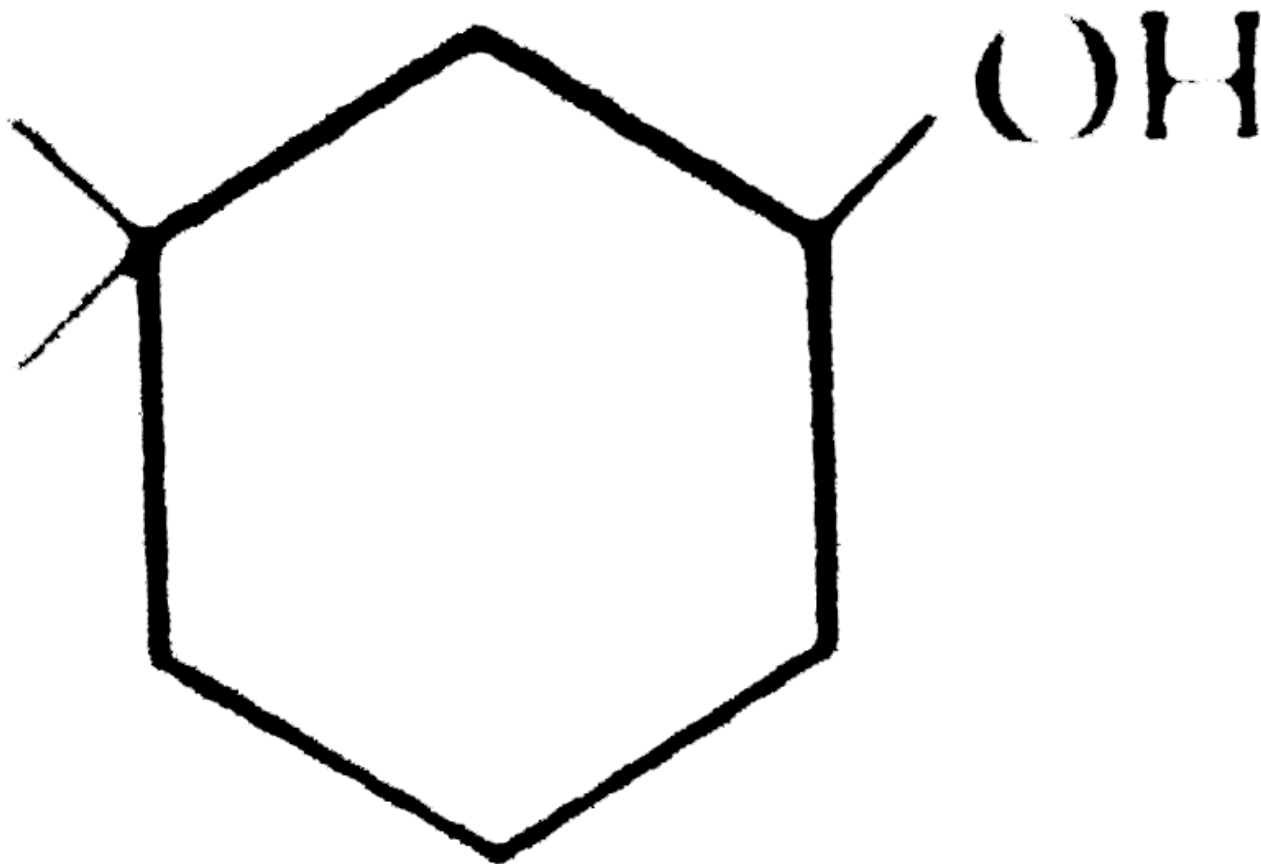
165. Given the correct IUPAC name for $\text{CH}_3\text{-CH}_2\text{-O-CH}_2\text{-CH}_2\text{-CH}_2\text{-Cl}$

- A. 2-Ethoxy-5-chloropentane
- B. 1-Chloro-4-ethoxy-4-methylbutane
- C. 5-Chloro-2-ethoxypentane
- D. Ethyl-1-chloropentylether

Answer: C

 [Watch Video Solution](#)

166. The IUPAC name of the compound is



- A. 3, 3-Dimethyl-1-cyclohexanol
- B. 1, 1-Dimethyl-3-hydroxy cyclohexane
- C. 3, 3-Dimethyl-1-hydroxy cyclohexane
- D. 1, 1-Dimethyl-3-cyclohexanol

Answer: A

[Watch Video Solution](#)

167.

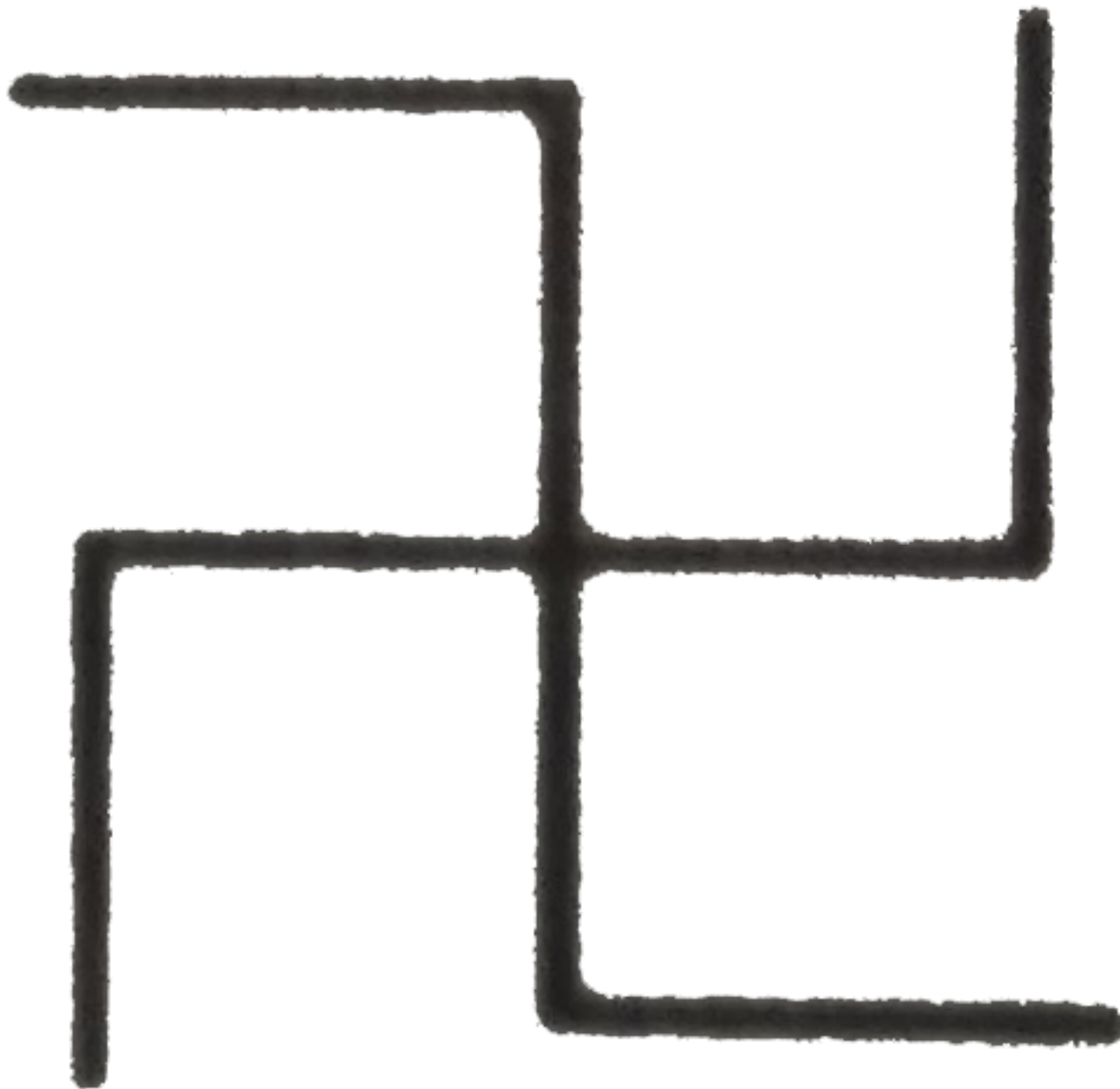
The

correct

IUPAC

name

for



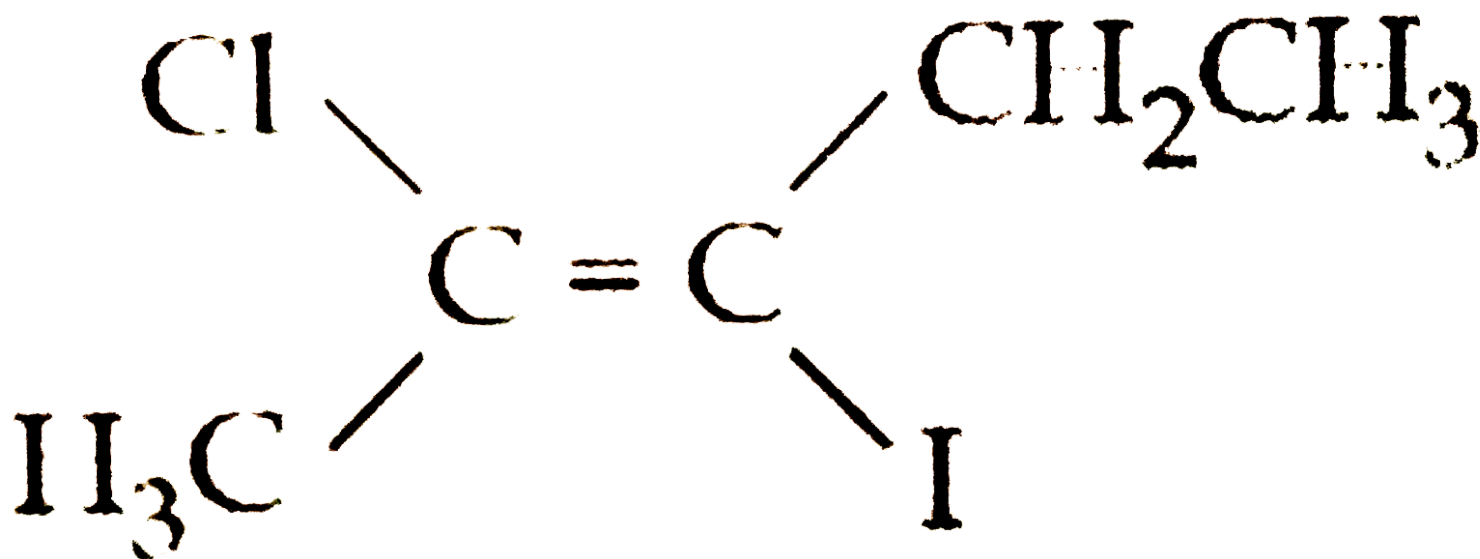
is

- A. Neononane
- B. Tetraethylmethane
- C. 3-Ethyl pentane
- D. 3, 3-Diethyl pentane

Answer: D

[▶ Watch Video Solution](#)

168. IUPAC name for the compound

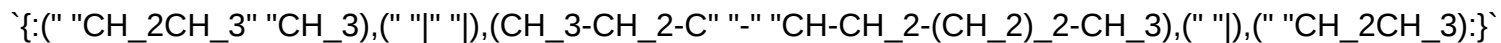


- A. Trans-3-iodo-4-chloro-3-pentene
- B. Cis-3-chloro-3-iodo-2-pentene
- C. Trans-2-chloro-3-iodo-2-pentene
- D. Cis-3-iodo-4-chloro-3-pentene

Answer: D

[▶ Watch Video Solution](#)

169. The IUPAC name of



- A. 2, 2-Diethyl-5-methyldecane
- B. 3, 3-Ethyl-5-methyldecane
- C. 3, 3-Diethyl-5-methylhexane
- D. 3, 3-Diethyl-4-methyl octane

Answer: D

 [Watch Video Solution](#)

170. $\text{CH}_3\text{CHOHCH}_2\text{C}(\text{CH}_3)_2\text{CH}_2\text{OH}$

- A. 1, 1-Dimethyl-1, 3-butanediol
- B. 2-Methyl-2, 4-pentanediol
- C. 4-Methyl-2, 4-pentanediol
- D. 1, 3, 3-trimethyl-1, 3-propanediol

Answer: B

 [Watch Video Solution](#)

171.

The

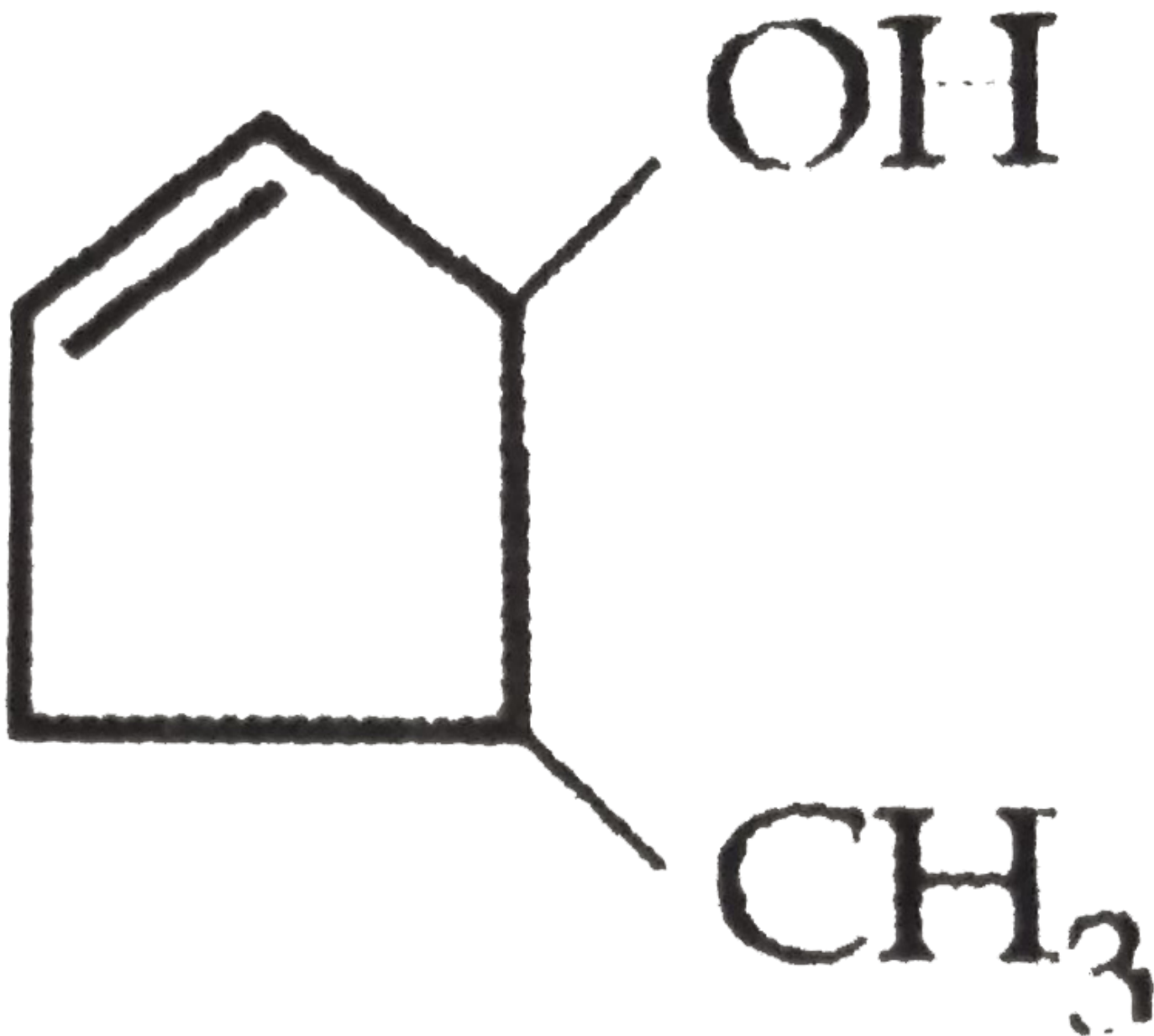
IUPAC

name

of

the

compound

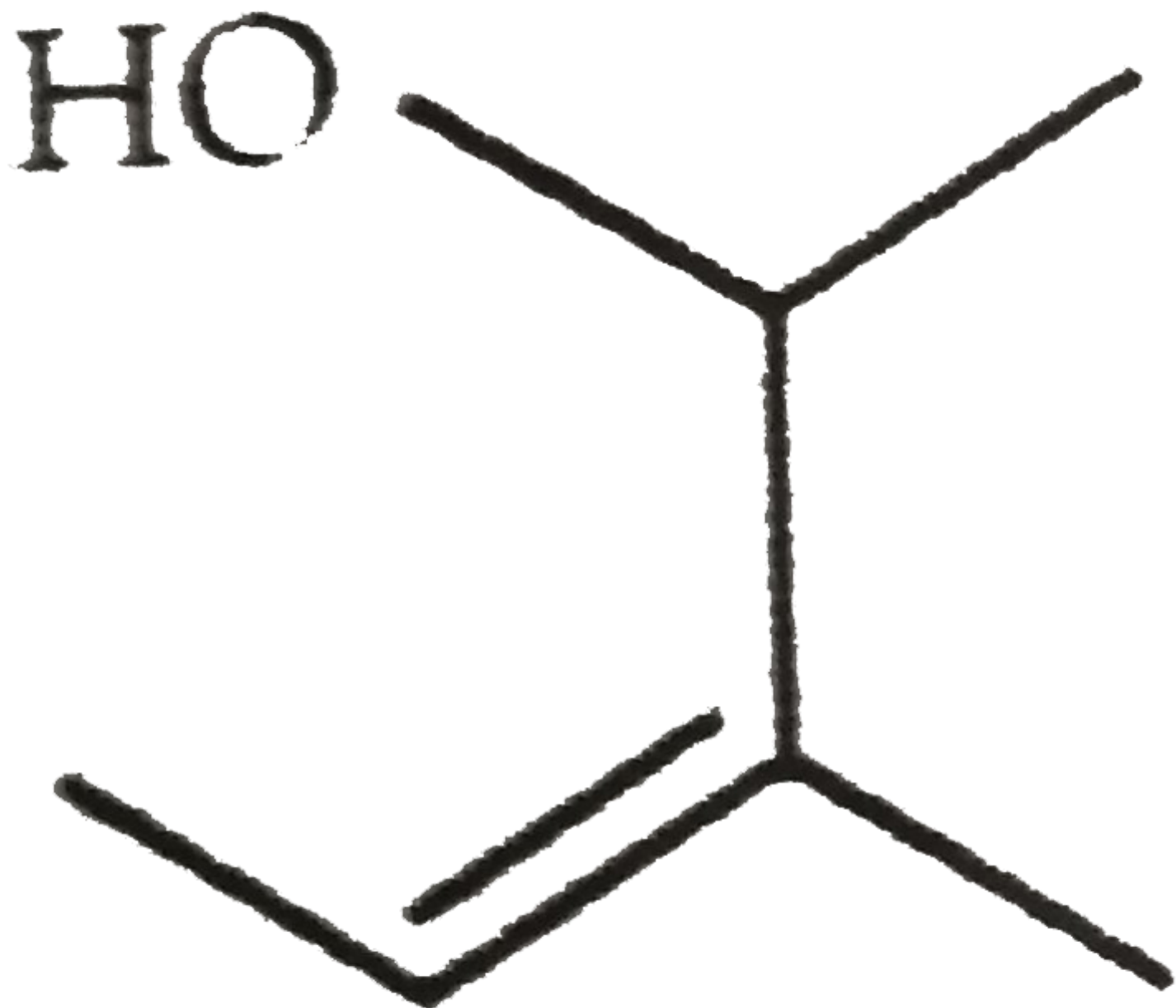


is

- A. 4-Methylcyclopent-1-en-3-ol
- B. 2-Methylcyclopent-4-en-1-ol
- C. 3-Methylcyclopent-1-en-2-ol
- D. 5-Methylcyclopent-2-en-ol

Answer: A

172. The IUPAC name of the following compound is



A. 1, 2-Dimethylbut-2-en-1-ol

B. 3-Methylpent-3-en-2-ol

C. 3, 4-Dimethylbut-2-en-4-ol

D. 2, 3-Dimethylpent-3-en-1-ol

Answer: B

 [Watch Video Solution](#)

173. The structure of 4-Methylpent-2-en-1-ol is

A. $\text{CH}_3\text{-CH}_2\text{-HC=CH-CH}_2\text{OH}$

B. $\text{CH}_3\text{-CH(CH}_3\text{)-HC=CH-CH}_2\text{OH}$

C. $\text{CH}_3\text{-CH(OH)-CH}_2\text{-CH=CH-CH}_3$

D. $\text{CH}_3\text{-CH(CH}_3\text{)-C=CH-CH}_2\text{CH}_2\text{OH}$

Answer: B

 [Watch Video Solution](#)

174. The IUPAC name of is

$\text{C}_2\text{H}_5\text{-CH}_2\text{-CH=CH-CH}_2\text{-CH}_2\text{-NH}_2$

A. 4-Ethylpent-4-en-2-amine

B. 2-Amino-4-ethylpent-4-ene

C. 2-Ethylpentan-4-amine

D. 4-Amino-2-ethylpent-1-ene

Answer: B

 [Watch Video Solution](#)

175. The compound which is not isomeric with diethyl ether is :

- A. n-propylmethyl ether
- B. Butane-1-ol
- C. 2-methylpropane-2-ol
- D. Butanone

Answer: D

 [Watch Video Solution](#)

176. Functional isomerism is exhibited by the following pair of compounds

- A. Acetone, propionaldehyde
- B. Diethyl ether, methyl propyl ether
- C. Butane, isobutane
- D. 1-butene, 2-butene

Answer: A

 [Watch Video Solution](#)

177. Methyl acetate and propionic acid are

- A. Functional isomer
- B. Structural isomer
- C. Stereoisomer
- D. Geometrical isomer

Answer: A

 [View Text Solution](#)

178. Isomers of propionic acid are

- A. HCOOC_2H_5 and $\text{CH}_3\text{COOCH}_3$
- B. HCOOC_2H_5 and $\text{C}_3\text{H}_7\text{COOCH}_3$
- C. $\text{CH}_3\text{COOCH}_3$ and $\text{C}_3\text{H}_7\text{OH}$
- D. $\text{C}_3\text{H}_7\text{OH}$ and CH_3COCH_3

Answer: A

 [Watch Video Solution](#)

179. Number of isomers of C_4H_{10} is

- A. 2
- B. 3

C. 4

D. Isomerism not exist

Answer: A

 [Watch Video Solution](#)

180. Which of the following compounds will show metamerism ?

A. $\text{CH}_3\text{COOC}_2\text{H}_5$

B. $\text{C}_2\text{H}_5\text{-O-C}_2\text{H}_5$

C. $\text{CH}_3\text{-O-CH}_3$

D. $\text{CH}_3\text{-O-C}_2\text{H}_5$

Answer: D

 [Watch Video Solution](#)

181. Which of the following is an example of acid anhydride?

A. HCHO

B. HCOOH

C. HCONH_2

D. $(\text{HCO})_2\text{O}$

Answer: D

[▶ Watch Video Solution](#)

182. In hyperconjugation, the atom involved is

- A. β -H atom
- B. α -H atom
- C. γ -H atom
- D. All the above

Answer: B

[▶ View Text Solution](#)

183. Which one of the following compounds is most acidic?

- A. $\text{CH}_3\text{CO}_2\text{H}$
- B. $\text{C}_6\text{H}_5\text{CO}_2\text{H}$
- C. $\text{C}_6\text{H}_5\text{OH}$



Answer: D

184. The - I effect is shown by

- A. -COOH
- B. -CH_3
- C. $\text{-CH}_2\text{CH}_3$
- D. -CHR_2

Answer: A

[Watch Video Solution](#)

185. Shifting of electron of a multiple bond under the influence of a reagent is called :

- A. I-effect
- B. E-effect
- C. M-effect
- D. T-effect

Answer: B

[Watch Video Solution](#)

186. Which of the following statements is false about resonance contribution structures ?

- A. Contributing structures contribute to the resonance hybrid in proportion of their relative energies
- B. Equivalent contributing structures make the resonance very important
- C. Contributing structures represent molecules having no real existence
- D. Contributing structures are less stable than the resonance hybrid

Answer: B

 [Watch Video Solution](#)

187. Point out the incorrect statement about resonance.

- A. Resonance structures should have nearly equal energy
- B. In resonance structures, the constituent atoms must be in the same position
- C. In resonance structures, there should not be same number of electron pairs
- D. Resonance structures should differ only in the location of electrons around the constituent atoms

Answer: C

 [Watch Video Solution](#)

188. C-Cl bond in $\text{CH}_2 = \text{CH} - \text{Cl}$ is difficult to cleave due to

- A. Resonance
- B. Electromeric effect
- C. Inductive effect

D. Hyperconjugation

Answer: A

 [Watch Video Solution](#)

189. Hyperconjugation involves overlap of the following orbitals :

A. σ - σ

B. σ -p

C. p-p

D. π - π

Answer: B

 [Watch Video Solution](#)

190. A permanent effect in carbon chain compounds in which electrons forming a bond between a carbon atom and another atom are partially displaced towards the atom with greatest electronegativity, is called_____.

A. inert pair effect

B. mesomeric effect

C. inductive effect

D. electromeric effect

Answer: C

 [Watch Video Solution](#)

191. The phenomenon in which atoms or groups in a compound can attract electrons, is called

- A. mesomeric effect
- B. $+$ ve inductive effect
- C. $-$ ve inductive effect
- D. inert pair effect

Answer: C

 [View Text Solution](#)

192. Chlorine atom in chloromethane is linked by a

- A. co-ordinate bond
- B. double bond
- C. covalent bond
- D. electrovalent bond

Answer: C

 [Watch Video Solution](#)

193. The effect in which atoms or groups in a compounds can push away the electrons is called _____ effect.

- A. δ^- inductive effect
- B. δ^+ inductive effect
- C. mesomeric effect
- D. electromeric effect

Answer: B

 [Watch Video Solution](#)

194. In the following chemical effect, the bonded pair of electron leaves the octet

- A. Inductive
- B. Saytezeff's
- C. Electromeric
- D. Electronic

Answer: C

 [View Text Solution](#)

195. The +I (inductive effect) is shown by

- A. F^-

B. -OH

C. -CH_3

D. C_6H_5

Answer: C

 [Watch Video Solution](#)

196. Which of the following exhibit electromeric effect ?

A. alkyl halides

B. alkyl amines

C. aldehydes

D. alkanes

Answer: C

 [Watch Video Solution](#)

197. The negative inductive effect is shown by

A. -CH_3

B. -COOH

C. $\text{-CH}_2\text{CH}_3$

D. -CHR_2

Answer: B

 [Watch Video Solution](#)

198. Displacement of electron in C-Cl bond towards Cl atom is called

- A. Inductive effect
- B. Electromeric effect
- C. Mesomeric effect
- D. Resonance effect

Answer: A

 [View Text Solution](#)

199. Carbon tetrachloride has no net dipole moment because of

- A. Its planar structure
- B. Its regular tetrahedral structure
- C. Similar size of carbon and chlorine atoms
- D. Similar electron affinities of carbon and chlorine

Answer: B

 [Watch Video Solution](#)

200. The order of bond strength among C-F, C-Cl, C-Br, C-I is

- A. $\text{C-F} > \text{C-Cl} > \text{C-Br} > \text{C-I}$
- B. $\text{C-F} < \text{C-Cl} < \text{C-Br} < \text{C-I}$
- C. $\text{C-F} > \text{C-Cl} < \text{C-Br} < \text{C-I}$
- D. $\text{C-F} > \text{C-I} < \text{C-Br} < \text{C-Cl}$

Answer: A

 [View Text Solution](#)

201. There is an increase of bond length of the carbon-halogen bond from CH_3F to CH_3I because

- A. the size of halogens increases from F to I.
- B. the size of the overlapping orbital increases from F to I
- C. sp^3 orbital of carbon, penetrate in increasing extents into the halogens orbital.
- D. electronegativity increases from F to I

Answer: A

 [View Text Solution](#)

202. Which of the following is non-polar ?

- A. CH_3Cl
- B. CH_2Cl_2

C. CHCl_3

D. CCl_4

Answer: D

 [View Text Solution](#)

203. Electromeric effect can be relayed in

A. carbon chain joined by single bond

B. carbon chain joined by double bond

C. carbon chain joined by triple bond

D. conjugated system

Answer: D

 [View Text Solution](#)

204. Slight shift of e^- towards one of the atom in covalent bond produces effect called

A. Inductive

B. Electromeric

C. Zeeman

D. Peroxide effect

Answer: A

 [View Text Solution](#)

205. In electromeric effect only _____ are shifted.

- A. α pair of e^-
- B. π pair of e^-
- C. α and π pair of e^-
- D. α or π Pair of

Answer: B

 [View Text Solution](#)

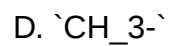
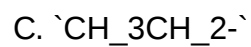
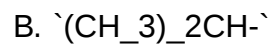
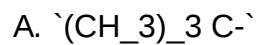
206. Methyl group (CH_3) shows the following effect:

- A. Electromeric effect
- B. $-ve$ inductive effect
- C. $+ve$ inductive effect
- D. Mesomeric effect

Answer: C

 [View Text Solution](#)

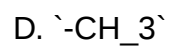
207. The positive inductive effect (+I) is found to be maximum in the following groups:



Answer: A

 [Watch Video Solution](#)

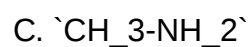
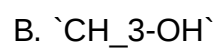
208. Which of the following groups shows negative inductive effect?



Answer: B

 [View Text Solution](#)

209. Which of the following molecule contains a bond having highest polarity ?



D. $\text{CH}_3\text{-Cl}$

Answer: B

 [Watch Video Solution](#)

210. Homolysis of propane gives:

- A. Methyl and ethyl free radicals
- B. Methyl cation and ethyl anion
- C. Methyl anion and ethyl cation (C_2H_5^+)
- D. Methyl and ethyl cations

Answer: C

 [Watch Video Solution](#)

211. Reactions involving heterolytic fission are said to be produced via

- A. Ionic mechanism
- B. Polar mechanism
- C. Both (a) and (b)
- D. None of these


Answer: C

 [View Text Solution](#)


212. Select the most stable carbocation from amongst the following



A.



B.



C.



D.

Answer: B

 Watch Video Solution

213. Consider the following carbocations

(I) $\text{C}_6\text{H}_5\text{CH}_2^+$, (II) $\text{C}_6\text{H}_5\text{CH}_2\text{CH}_2^+$

(III) $\text{C}_6\text{H}_5\text{CHCH}_3^+$, (IV) $\text{C}_6\text{H}_5\text{C}(\text{CH}_3)_2^+$

The correct sequence for the stability of these is

A. $\text{II} > \text{I} > \text{III} > \text{IV}$

B. $\text{II} > \text{III} > \text{I} > \text{IV}$

C. $\text{III} > \text{II} > \text{IV}$

D. $\text{IV} > \text{III} > \text{I} > \text{II}$

Answer: A

 [Watch Video Solution](#)

214. Which of the following contains three pairs of electron?

A. Carbocation

B. Carbanion

C. Free radical

D. None of these

Answer: A

 [Watch Video Solution](#)

215. Among the given cation,s the most stable carbonium ions is ?

- A. Sec-butyl
- B. Tert-butyl
- C. n-butyl
- D. None of these

Answer: B

 [Watch Video Solution](#)

216. Heterolysis of carbon-chlorine bond produces

- A. Two free radicals
- B. Two carbonium ions
- C. Two carbanions
- D. One cation and one anion

Answer: D

 [Watch Video Solution](#)

217. Which of the following intermediates have the complete octet around the carbon atom?

- A. Carbonium ion
- B. Carbanion ion
- C. Free radical

D. Carbene

Answer: B

 [Watch Video Solution](#)

218. Which kind of fission is favoured by sunlight

- A. Heterolytic fission
- B. Homolytic fission
- C. Both (a) and (b)
- D. None of these

Answer: B

 [Watch Video Solution](#)

219. The most stable carbonium ion among the following is

- A. $\text{C}_6\text{H}_5\overset{+}{\text{C}}\text{HC}_6\text{H}_5$
- B. $\text{C}_6\text{H}_5\text{CH}_2\overset{+}{\text{C}}\text{H}_2$
- C. $\text{CH}_3\overset{+}{\text{C}}\text{H}_2$
- D. $\text{C}_6\text{H}_5\text{CH}_2\overset{+}{\text{C}}\text{H}_2$

Answer: A

 [Watch Video Solution](#)

220. The stability of 2,3-dimethyl-but-2-ene is more than 2-butene. This can be explained in terms of

- A. Resonance
- B. Hyperconjugation
- C. Electromeric effect
- D. Inductive effect

Answer: B

 [View Text Solution](#)

221. In which of the following species, the central carbon atom is negatively charged?

- A. carbanion
- B. carbonium ion
- C. carbocation
- D. free radicals

Answer: A

 [Watch Video Solution](#)

222. The shape of the carbonium ion is

- A. planar
- B. linear
- C. pyramidal
- D. distorted tetrahedral

Answer: A

 [Watch Video Solution](#)

223. The heterolytic cleavage of a C-Cl bond produces

- A. Two free radicals
- B. Two carbonium ions
- C. Two carbanions
- D. One cation and one anion

Answer: D

 [Watch Video Solution](#)

224. The species containing carbon with three bonds and an electron are called

- A. carbene
- B. carbanion
- C. carbonium ion

D. free radical

Answer: D

 [Watch Video Solution](#)

225. The shape of carbanion is

A. linear

B. planar

C. pyramidal

D. distorted tetrahedral

Answer: D

 [Watch Video Solution](#)

226. In Homolytic fission of covalent bond _____ is formed

A. cation

B. anion

C. ion

D. free radical

Answer: D

 [Watch Video Solution](#)

227. Cation and anions are formed in

- A. heterolysis
- B. homolysis
- C. $\text{S}_{\text{N}}2$ reaction
- D. E_2 reaction

Answer: A

 [Watch Video Solution](#)

228. Carbon atom holding halogen in alkyl halide is

- A. sp^2 -hybridised
- B. sp^3 -hybridised
- C. sp-hybridised
- D. sp^3d hybridised

Answer: B

 [Watch Video Solution](#)

229. Which of the following statement is correct?

- A. Carbanion is formed by homolysis
- B. Free radical are formed by homolysis
- C. Carbocation is formed by homolysis
- D. Free radical are formed by heterolysis

Answer: B

 [View Text Solution](#)

230. Negatively charged carbon species having eight electrons in its outermost orbit is called as

- A. carbonium ion
- B. carbanion
- C. carbocation
- D. both(a) and (c)

Answer: B

 [View Text Solution](#)

231. Carbonium ion of tert. butyl bromide is

- A. Planar
- B. Linear
- C. Tetrahedral

D. Octahedral

Answer: A

 [Watch Video Solution](#)

232. Carbanion ion is formed when outgoing group is _____ electropositive than central carbon atom.

A. Less

B. more

C. equally

D. very less

Answer: B

 [Watch Video Solution](#)

233. When 2-chloro-2-methyl propane undergoes heterolytic fission, the cation formed is:

A. tert-Butylcarbocation

B. tert-Butyl carbanion

C. sec-Butyl carbonium ion

D. sec-Butyl carbocation

Answer: A

 [Watch Video Solution](#)

234. Carbanion contains _____ electrons in valence shell

- A. 8
- B. 6
- C. 4
- D. 2

Answer: A

 [Watch Video Solution](#)

235. The compounds which gives the most stable carbonium ions on dehydrohalogenation is

- A. CH_3I
- B. $\text{C}_2\text{H}_5\text{I}$
- C. $(\text{CH}_3)_3\text{CI}$
- D. $(\text{CH}_3)_2\text{CHI}$

Answer: C

 [View Text Solution](#)

236. Heterolytic fission of C - Br bond results in the formation of

- A. Free radicals
- B. Carbanion
- C. Carbocation
- D. Carbanion and Carbocation

Answer: C

 [View Text Solution](#)

237. The total number of electrons in the carbon atom of methyl free radical is

- A. Six
- B. Seven
- C. Eight
- D. Nine

Answer: D

 [View Text Solution](#)

238. Unpaired electron in CH_3 occupies

- A. sp-Hybrid orbital
- B. sp^3 -Hybrid orbital
- C. p-Orbital

D. sp^3 -Hybrid orbital

Answer: B

 [View Text Solution](#)

239. Which of the following is an electrophile ?

A. H_2O

B. SO_3

C. NH_3

D. ROR

Answer: B

 [View Text Solution](#)

240. Which is a nucleophile

A. Carbonium ion

B. Carbanion

C. Both (a) and (b)

D. None of these

Answer: B

 [Watch Video Solution](#)

241. Which of the following represents a set of nucleophiles ?

- A. $\text{BF}_3, \text{H}_2\text{O}, \text{NH}_2^-$
- B. $\text{AlCl}_3, \text{BF}_3, \text{NH}_3$
- C. $\text{CN}^-, \text{RCH}_2^-, \text{ROH}$
- D. $\text{H}^+, \text{RNH}_3^+, \text{C}_2\text{H}_5^-$

Answer: C

 [View Text Solution](#)

242. Which of the following species acts as electrophile ?

- A. OH^-
- B. H_3O^+
- C. Cl^-
- D. NH_3

Answer: B

 [View Text Solution](#)

243. Which of the following species does not acts as a nucleophile ?

A. `ROH`

B. `ROR`

C. `PCl_3`

D. `BF_3`

Answer: D

 [Watch Video Solution](#)

244. The electron-rich species which attack a carbocation or positively charged centers or at the points of low electron density, are called

A. mesophiles

B. nucleophiles

C. electrophiles

D. free radicals

Answer: B

 [View Text Solution](#)

245. The electrophiles are

A. Lewis bases

B. Lewis acids

C. amphoteric

D. electron rich

Answer: B

 [Watch Video Solution](#)

246. The electron deficient reagents, which attract the negatively charged carbanions are called

A. mesophiles

B. electrophiles

C. nucleophiles

D. free radicals

Answer: B

 [View Text Solution](#)

247. Boron trifluoride is

A. an electrophile

B. a nucleophile

C. a homolytic reagent

D. a heterolytic reagent

Answer: A

 [Watch Video Solution](#)

248. The electrophile in aromatic sulphonation is

- A. H_2SO_4
- B. HSO_4^-
- C. SO_3
- D. SO_3H^+

Answer: D

 [View Text Solution](#)

249. Which of the following is free radical?

- A. NO_2
- B. Cl^-
- C. Cl
- D. Cl^+

Answer: C

 [View Text Solution](#)

250. Which of the following species is an electrophile

A. H_2O

B. NH_3

C. R-O-H

D. CO_2

Answer: D

 [View Text Solution](#)

251. Which of the following species is a nucleophile ?

A. NO_2^+

B. CCl_2

C. CH_3

D. CN^-

Answer: D

 [Watch Video Solution](#)

252. Which one of the following series contains electrophiles only ?

A. $\text{H}_2\text{O}, \text{SO}_3, \text{NO}_2^+$

B. $\text{NH}_3, \text{H}_2\text{O}, \text{BI}_3$

C. $\text{AlCl}_3, \text{SO}_3, \text{Cl}^+$

D. $\text{ROH, NH}_3, \text{NO}_2^+$

Answer: C

 [Watch Video Solution](#)

253. Which of the following series contains nucleophiles only ?

A. $\text{BF}_3, \text{AlCl}_3, \text{NH}_3$

B. $\text{RCH}_2^-, \text{CN}^-, \text{CH}_3\text{CH}_2\text{OH}$

C. $\text{BF}_3, \text{NH}_2^-, \text{H}_2\text{O}$

D. $\text{RNH}_2, \text{CCl}_2, \text{H}^+$

Answer: B

 [Watch Video Solution](#)

254. Which of the following is not Lewis acid?

A. AlCl_3

B. BeCl_2

C. BF_3

D. NCl_3

Answer: D

 [Watch Video Solution](#)

255. Of the five isomeric hexanes, the isomer which can give two monochlorinated compounds is

- A. 2-methylpentane
- B. 2,2-dimethylbutane
- C. 2,3-dimethylbutane
- D. n-hexane

Answer: C

 [Watch Video Solution](#)

256. $\text{CH}_3\text{-Br} + \text{NH}_3 \rightarrow \text{CH}_3\text{-NH}_2 + \text{HBr}$

The above reaction is classified as

- A. Substitution
- B. Addition
- C. Elimination
- D. Rearrangement

Answer: A

 [View Text Solution](#)

257. $\text{CH}_2=\text{CHOH} \rightleftharpoons \text{CH}_3\text{-overset(O)overset(|)C-H}$

The above reaction is classified as _____ reaction.

- A. Substitution
- B. Addition
- C. Elimination
- D. Rearrangement

Answer: D

 [View Text Solution](#)

258. Alkyl halide on reaction with aq. KOH forms

- A. Alcohol
- B. Alkene
- C. Aldehyde
- D. Alkyne

Answer: A

 [Watch Video Solution](#)

259. Addition reaction takes place in

- A. Alkane

- B. Alkene
- C. Alkyl halide
- D. Cycloalkane

Answer: B

 [View Text Solution](#)

260. $\text{CH}_3\text{-CH}_3 + \text{Cl}_2 \xrightarrow{\text{U.V. Light}} \text{CH}_3\text{-CH}_2\text{Cl} + \text{HCl}$

Above reaction involves

- A. Formation of Cl - Cl bond
- B. Breaking of Cl - Cl bond
- C. Breaking of C - C bond
- D. Formation of C - Cl bond

Answer: D

 [View Text Solution](#)

261. In which of the following reaction modification of carbon skeleton takes place ?

- A. Substitution
- B. Addition
- C. Rearrangement

D. Elimination

Answer: C

 [View Text Solution](#)

262. Hydrogenation of alkyne is

A. Addition reaction

B. Elimination reaction

C. Rearrangement reaction

D. Substitution reaction

Answer: A

 [View Text Solution](#)

263. Dehydrohalogenation of alkyl halide is

A. Addition reaction

B. Elimination reaction

C. Rearrangement reaction

D. Substitution reaction

Answer: B

 [View Text Solution](#)

264. Aliphatic saturated hydrocarbon can give

- A. Addition reaction
- B. Elimination reaction
- C. Both (a) and (b)
- D. Substitution reaction

Answer: D

 [View Text Solution](#)

265. Isobutyl alcohol in acidic medium gives tert-butyl alcohol, the reaction is

- A. Addition reaction
- B. Substitution reaction
- C. Elimination reaction
- D. Rearrangement reaction

Answer: D

 [View Text Solution](#)

266. Which of the following statement is not correct?

- A. Primary carbonium ions are more stable than secondary ones
- B. Secondary free radicals are more stable than primary free radicals
- C. Tertiary free radicals are more stable than secondary ones
- D. Tertiary carbonium ions are more stable than primary ones

Answer: A

 [View Text Solution](#)

267. Which one of the following does not show resonance?

- A. Carbon dioxide
- B. Benzene
- C. Nitromethane
- D. Propane

Answer: D

 [View Text Solution](#)

268. Resonance structures of a molecule do not have:

- A. Identical arrangement of atoms
- B. Nearly the same energy content
- C. The same number of paired electrons

D. Identical bonding

Answer: D

 [Watch Video Solution](#)

269. Which one of the following behaves both as a nucleophile and an electrophile ?

A. $\text{CH}_3\text{C}=\text{N}$

B. CH_3OH

C. $\text{CH}_2=\text{CHCH}_3$

D. CH_3NH_2

Answer: A

 [Watch Video Solution](#)

270. All bonds in benzene are equal due to

A. Tautomerism

B. Inductive effect

C. Resonance

D. Isomerism

Answer: C

 [View Text Solution](#)

271. C-C' bond length in benzene lies between single and double bond. The reason is

- A. Resonance
- B. Isomerism
- C. Metamerism
- D. Inductive effect

Answer: A

 [Watch Video Solution](#)

272. Which of the following is the most stable?

- A. $\text{Ph}_3\overset{+}{\text{C}}$
- B. $\text{Ph}_2\overset{+}{\text{CH}}$
- C. $\text{Ph}_3\underset{+}{\text{C}}\text{C}^+\text{H}_2$
- D. $\text{Ph}\overset{+}{\text{C}}\text{H}_2$

Answer: A

 [Watch Video Solution](#)

273. Which of the following resonating structures of 1-methoxy-1,3-butadiene is least stable ?

- A. $\overset{\Theta}{\text{CH}_2}\text{-CH=CH-CH}=\overset{\oplus}{\text{O-CH}_3}$
- B. $\text{CH}_2=\text{CH}_2\text{-}\overset{\Theta}{\text{CH-CH}}=\overset{\oplus}{\text{O-CH}_3}$
- C. $\overset{\Theta}{\text{CH}_2}\text{-}\overset{\oplus}{\text{CH}_2}\text{-CH=CH-O-CH}_3$
- D. $\overset{\Theta}{\text{CH}_2}\text{-}\overset{\oplus}{\text{CH}_2}\text{-CH=CH-O-CH}_3$

Answer: A

 [Watch Video Solution](#)

274. Which of the following free radicals is most stable?

- A. Primary
- B. Methyl
- C. Secondary
- D. Tertiary

Answer: D

 [View Text Solution](#)

275. Which is the most stable carbocation?

- A. Iso-propyl
- B. Triphenylmethyl cation
- C. Ethyl cation

D. n-propyl cation

Answer: B

 [View Text Solution](#)

276. The increasing order of stability of the following free radicals is:

- A. $\text{CH}_3\text{CH}_2\dot{\text{C}}\text{H} < \text{CH}_3\text{CH}_2\dot{\text{C}}\text{H} < \text{C}_6\text{H}_5\text{CH}_2\dot{\text{C}}\text{H} < \text{C}_6\text{H}_5\dot{\text{C}}\text{H}$
- B. $\text{C}_6\text{H}_5\dot{\text{C}}\text{H} < \text{C}_6\text{H}_5\text{CH}_2\dot{\text{C}}\text{H} < \text{CH}_3\text{CH}_2\dot{\text{C}}\text{H} < \text{CH}_3\text{CH}_2\dot{\text{C}}\text{H}$
- C. $\text{C}_6\text{H}_5\text{CH}_2\dot{\text{C}}\text{H} < \text{CH}_3\text{CH}_2\dot{\text{C}}\text{H} < \text{CH}_3\text{CH}_2\dot{\text{C}}\text{H} < \text{CH}_3\text{CH}_2\dot{\text{C}}\text{H}$
- D. $\text{CH}_3\text{CH}_2\dot{\text{C}}\text{H} < \text{CH}_3\text{CH}_2\dot{\text{C}}\text{H} < \text{C}_6\text{H}_5\text{CH}_2\dot{\text{C}}\text{H} < \text{C}_6\text{H}_5\dot{\text{C}}\text{H}$

Answer: A

 [Watch Video Solution](#)

277. Which one of the following carbanions is the least stable

- A. $\text{CH}_3\text{CH}_2\text{C}^-$
- B. $\text{C}_6\text{H}_5\text{C}^-$
- C. CH_3C^-
- D. $(\text{CH}_3)_3\text{C}^-$

Answer: D

 [Watch Video Solution](#)

278. Mesomeric effect involves delocalization of `:``

- A. Protons
- B. Sigma electrons
- C. `pi`-electrons
- D. None of these

Answer: C

 [Watch Video Solution](#)

279. Hyperconjugation effect is also known as

- A. Baker-Nathan effect
- B. No bond resonance
- C. Both (a) and (b)
- D. None of these

Answer: A

 [View Text Solution](#)

280. The compound `C_(4)H_(10)O` can show

- A. Metamerism
- B. Functional isomerism
- C. Positional isomerism
- D. All types

Answer: D

 [Watch Video Solution](#)

281. n-Propyl alcohol and isopropyl alcohol are examples of

- A. Position isomerism
- B. Chain isomerism
- C. Tautomerism
- D. Geometrical isomerism

Answer: A

 [Watch Video Solution](#)

282. Geometrical isomerism

$\text{CH}_3\text{-(CH}_2\text{)}_3\text{-O-CH}_3$,

$\text{CH}_3\text{-CH}_2\text{-O-CH}_2\text{-CH}_2\text{-CH}_3$

$\text{CH}_3\text{-underset(CH}_3\text{)}\text{underset{()}\text{CH-OCH}_2\text{-CH}_3$ is

- A. Position isomerism
- B. Chain isomerism
- C. Metamerism
- D. Optical isomerism

Answer: C

 [View Text Solution](#)

283. Which of the following statement is wrong ?

- A. Diethyl ketone and methyl propyl ketone are position isomers
- B. 2-Chloro pentane and 1-Chloro pentane are position isomers
- C. n-butane and 2-methyl propane are chain isomers
- D. Acetone and propionaldehyde are functional isomers

Answer: A

 [View Text Solution](#)

284. $\text{CH}_3\text{CH}_2\text{CH}=\text{CH}_2$ and $\text{CH}_3\text{CH}=\text{CH}-\text{CH}_3$ show

- A. Chain isomerism
- B. Position isomerism
- C. Functional isomerism

D. Metamerism

Answer: B

 [View Text Solution](#)

285. Benzoic acid can be purified by

- A. Sublimation
- B. Crystallization
- C. Distillation
- D. Chromatography

Answer: B

 [View Text Solution](#)

286. Acetone and water is purified by _____ methods.

- A. Crystallization
- B. Simple distillation
- C. Chromatography
- D. distillation

Answer: D

 [View Text Solution](#)

287. Technique of distribution of mixture between two phases, one stationary phase and other mobile phase is

- A. Distillation
- B. Filtration
- C. Crystallisation
- D. Chromatography

Answer: D

 [View Text Solution](#)

288. Separation of substance of a mixture over adsorbent coated on glass tube is ____ chromatography.

- A. Column
- B. TLC
- C. Paper
- D. Gas

Answer: B

 [View Text Solution](#)

289. 0.2345 g of an organic compound was analysed for nitrogen by Duma's method. 31.7 mL of moist nitrogen was collected at 25°C and 755.8 mm of Hg pressure. Calculate the percentage of nitrogen in the sample.

(Aq. tension of water at 25°C is 23.8 mm of Hg)

- A. 0.18
- B. 0.197
- C. 0.151
- D. 0.202

Answer: C

 [View Text Solution](#)

290. 0.2585g of an organic compound containing iodine was heated with excess of strong nitric acid and silver nitrate in a carius tube. The precipitate of silver iodide was filtered, washed and dried its weight was found to be 0.3894g . Calculate the % of iodine in the compound.

- A. 0.814
- B. 0.78
- C. 0.9
- D. 0.8624

Answer: A

 [Watch Video Solution](#)

291. 0.12 gm of an organic compound containing phosphorus gave 0.22 gm of $\text{Mg}_2\text{P}_2\text{O}_7$ by the usual analysis. Calculate the percentage of phosphorus in the compound.

- A. 0.65
- B. 0.61
- C. 0.58
- D. 0.512

Answer: D

 [Watch Video Solution](#)

292. During estimation of nitrogen present in an organic compound by Kjeldahl's method, the ammonia evolved from 0.5 g of the compound in Kjeldahl's estimation of nitrogen, neutralized 10 mL of 1 M H_2SO_4 . Find out the percentage of nitrogen in the compound.

- A. 0.56
- B. 0.46
- C. 0.6
- D. 0.36

Answer: A

 [Watch Video Solution](#)

293. 0.1 g of an organic compound gave 0.222g of $\text{Mg}_2\text{P}_2\text{O}_7$. What is the percentage of phosphorus in the compound ?

- A. 0.32
- B. 0.42
- C. 0.52
- D. 0.62

Answer: D

 [View Text Solution](#)

294. 0.35 g of an organic substance was Kjeldahised and the ammonia obtained was passed into 100ml of $\text{M}/10\text{H}_2\text{SO}_4$. The excess acid required 154 ml of $\text{M}/10\text{NaOH}$ for neutralisation, calculate the % of nitrogen in the compound.

- A. 18.4
- B. 28.4
- C. 38.4
- D. 48.4

Answer: A

 [Watch Video Solution](#)

295. If on adding FeCl_3 solution to acidified Lassaigne's solution a blood red coloration is produced, it indicates the presence of

- A. S
- B. N
- C. N and S
- D. Sand Cl

Answer: C

 [Watch Video Solution](#)

296. Separation of petroleum into its components is mostly done by

- A. Chromatography
- B. Sublimation
- C. Distillation under reduced pressure
- D. Fractional distillation

Answer: D

 [View Text Solution](#)

297. How will you separate a solution (miscible) of benzene + CHCl_3 ?

- A. Sublimation

- B. Filtration
- C. Distillation
- D. Crystallization

Answer: C

 [Watch Video Solution](#)

298. The purpose of boiling sodium extract with conc. HNO_3 before testing for halogen is :

- A. To make solution clear
- B. To destroy CN^- and S^{2-} ions which will otherwise give precipitate
- C. To make the solution acidic
- D. To convert Fe^{2+} to Fe^{3+}

Answer: B

 [Watch Video Solution](#)

299. The Prussian blue colour obtained in the Lassaigne's test for nitrogen is due to the formation of

- A. Iron (II) hexacyanoferrate (III)
- B. Iron (III) hexacyanoferrate (II)
- C. Iron (III) hexacyanoferrate (III)
- D. Sodium hexacyanoferrate (III)

Answer: B

 [View Text Solution](#)

300. 0.2 g of an organic compound gave 0.15 g of silver chloride in Carius method for estimation of chlorine.

Find the percentage of chlorine in the compound. [Ag= 108, Cl= 35.5]

- A. 48.56
- B. 38.56
- C. 28.56
- D. 18.56

Answer: D

 [Watch Video Solution](#)

301. The state of hybridization of C_2, C_3, C_5 and C_6 of the hydrocarbon,

$C_7H_3-CH_3-CH_6-CH_3-CH_5$

$C_4H=C_3H-CH_3-CH_2-C_1H$ is:

- A. sp, sp^3, sp^2 and sp^3
- B. sp, sp^3, sp^2 and sp^2
- C. sp, sp^2, sp^2 and sp^3
- D. sp, sp^2, sp^3 and sp^2

Answer: A

 [Watch Video Solution](#)

302. The number of π -bonds in 3-Hexyne-1-ene is

- A. 1
- B. 2
- C. 3
- D. 4

Answer: C

 [Watch Video Solution](#)

303. Which one of the following is more acidic ?

- A. Butane
- B. 1-Butene
- C. 1-Butyne
- D. 2-Butyne

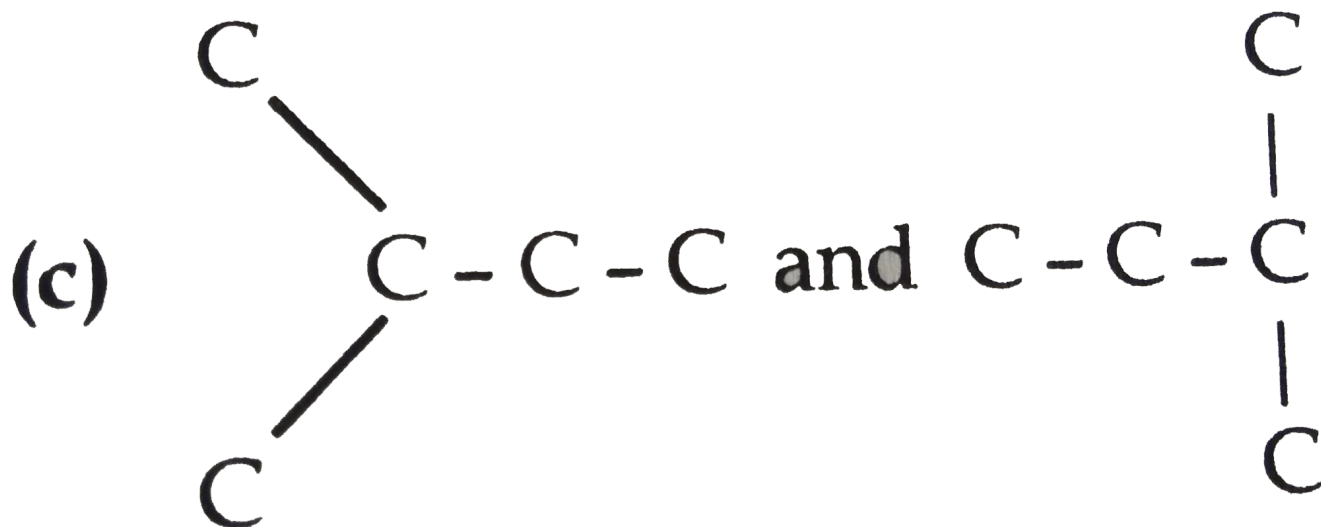
Answer: C

 [View Text Solution](#)

304. Which is the example of branch isomerization

A. $\overset{\text{C}}{\text{C}}-\overset{\text{C}}{\text{C}}-\overset{\text{C}}{\text{C}}-\overset{\text{C}}{\text{C}}$ and $\underset{\text{C}}{\text{C}}-\underset{\text{C}}{\text{C}}-\overset{\text{C}}{\text{C}}-\overset{\text{C}}{\text{C}}$

B. $\underset{\text{C}}{\text{C}}-\underset{\text{C}}{\text{C}}-\overset{\text{C}}{\text{C}}-\overset{\text{C}}{\text{C}}$ and $\overset{\text{C}}{\text{C}}-\overset{\text{C}}{\text{C}}-\underset{\text{C}}{\text{C}}-\underset{\text{C}}{\text{C}}$



C.

D. $\text{C}-\text{C}-\text{C}-\text{C}$ and $\text{C}-\text{C}-\underset{\text{C}}{\text{C}}-\underset{\text{C}}{\text{C}}$

Answer: A

 Watch Video Solution



is

- A. 4, 5-Dimethyloct-4-ene
- B. 3, 4-Dimethyloct-5-ene
- C. 4, 5-Dimethyloct-5-ene
- D. None of these

Answer: A

 [Watch Video Solution](#)

306.

The

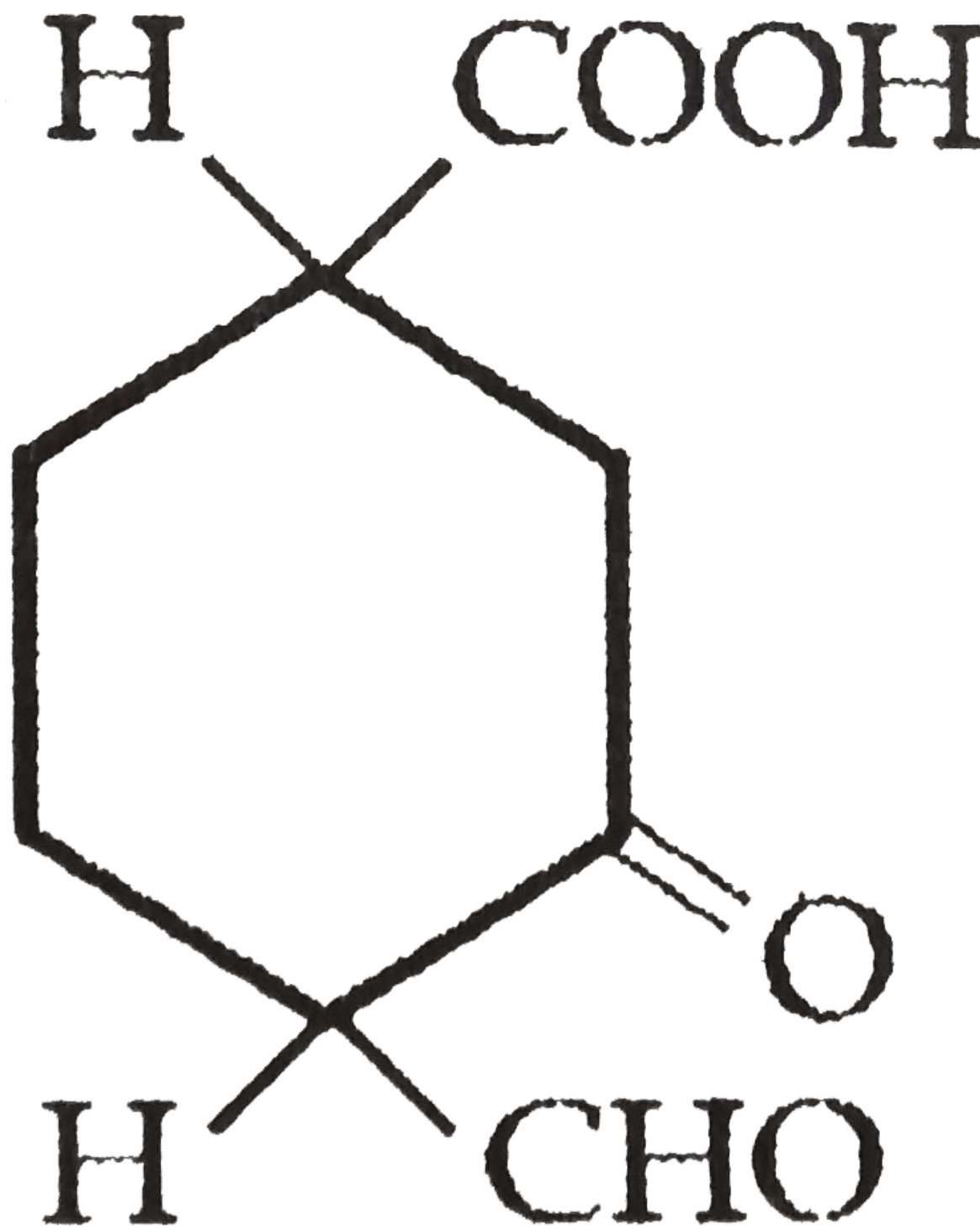
IUPAC

name

of

the

compound



A. 4-Formyl-3-oxo cyclohexane-1-carboxylic acid

B. 2, 4-dioxo cyclohexanoic acid

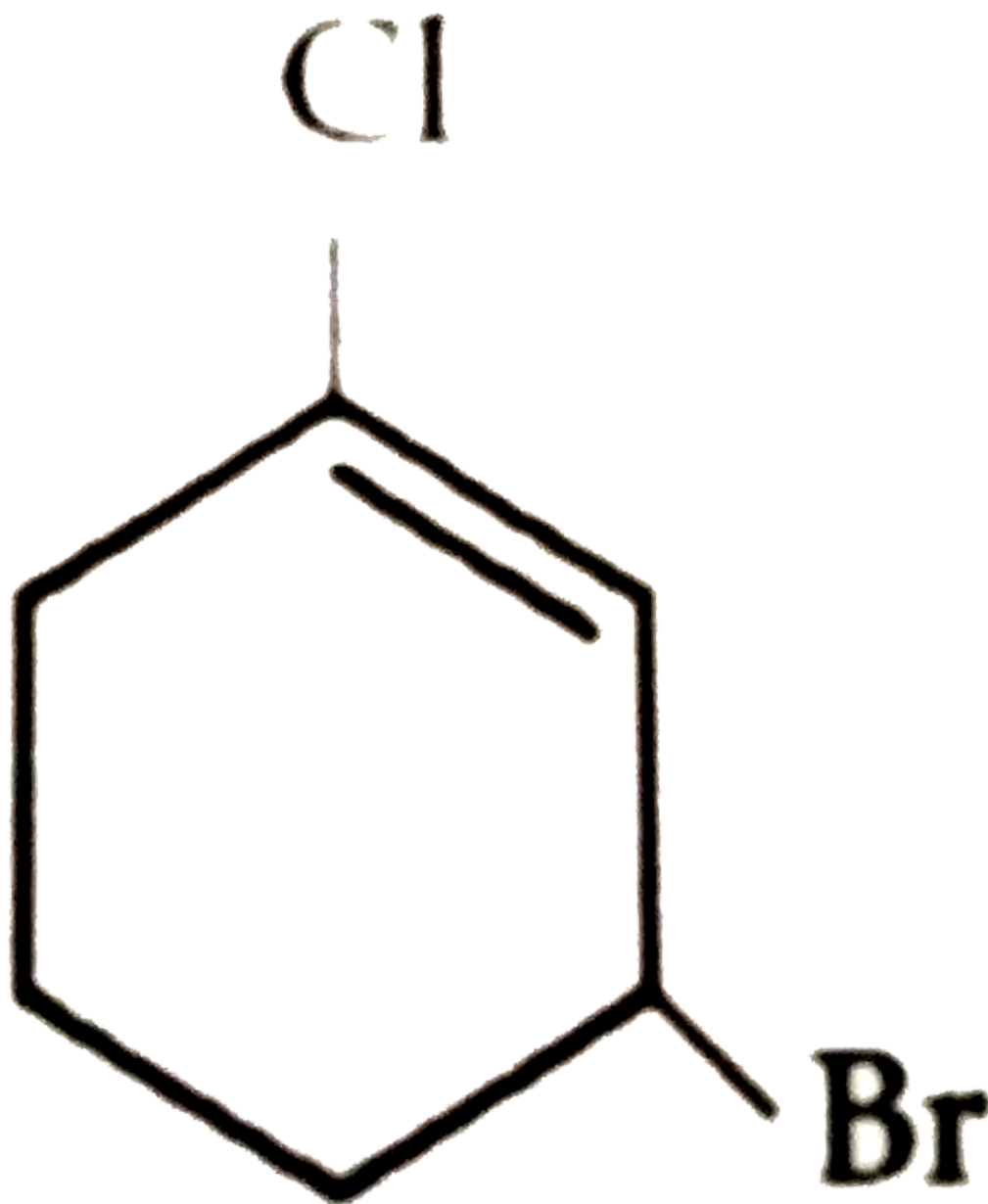
C. 2-Chloro-4-ethyl-3-methyl-hept-2-en-6-yne

D. 2-Chloro-4-ethyl-3-methyl-hept-6-yn-2-ene

Answer: A

[▶ Watch Video Solution](#)

309. The IUPAC name of the compound shown below is

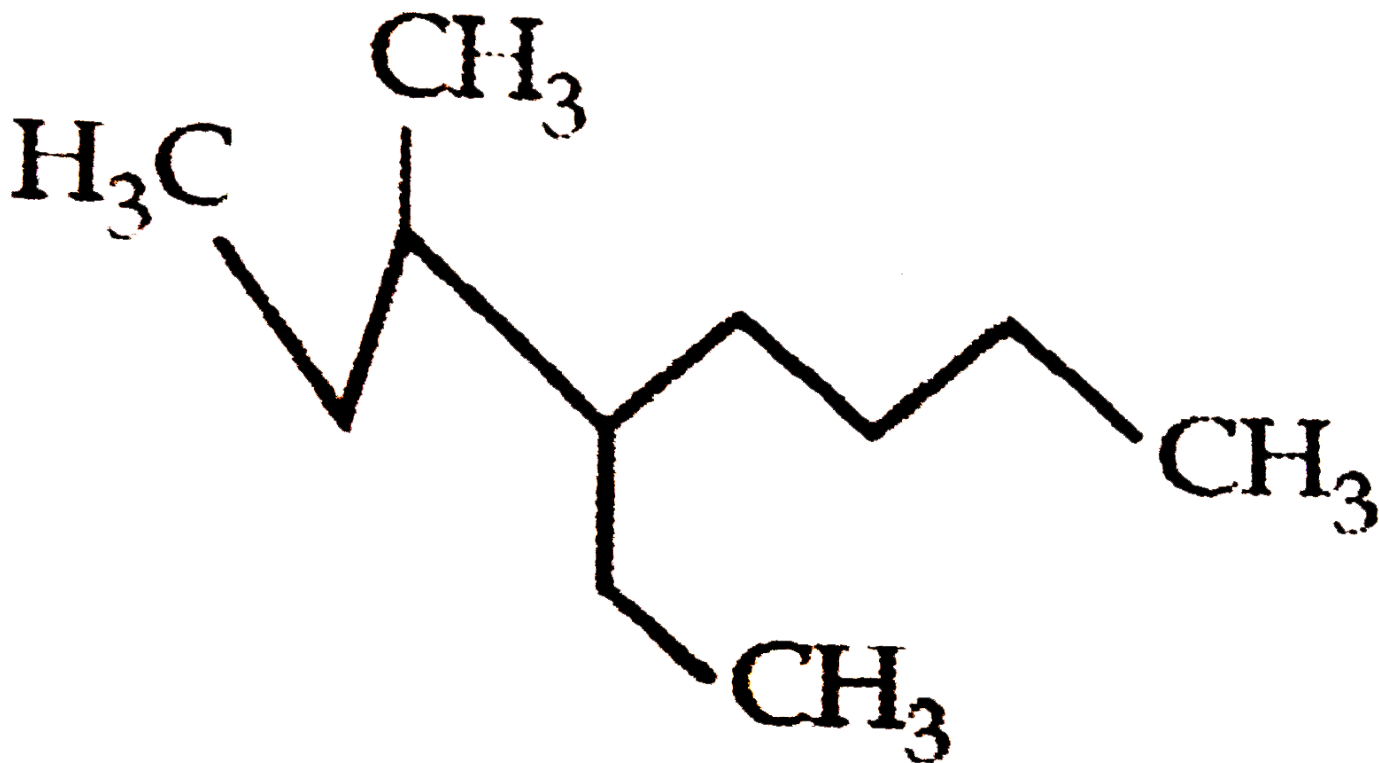


- A. 2-Bromo-6-chlorocyclohex-1-ene
- B. 6-Bromo-2-chlorocyclohexene
- C. 3-Bromo-1-chlorocyclohexene
- D. 1-Bromo-3-chlorocyclohexene

Answer: D

[▶ Watch Video Solution](#)

310. Name of the compound given below is



- A. 5-Ethyl-6-methyloctane
- B. 4-Ethyl-3-methyloctane
- C. 3-Methyl-4-ethyloctane

D. 2, 3-Diethylheptane

Answer: C

 [Watch Video Solution](#)

311. Hyperconjugation is

- A. σ - π conjugation
- B. Noticed due to delocalization of σ and π bonds
- C. No bond resonance
- D. All the above

Answer: D

 [View Text Solution](#)

312. C-C bond length in benzene is

- A. 1.39 Å
- B. 1.54 Å
- C. 1.34 Å
- D. Different in different bonds

Answer: C

 [Watch Video Solution](#)

313. Which of the following species is paramagnetic in nature?

- A. Free radical
- B. Carbonium ion
- C. Carbanion
- D. All the above

Answer: A

 [Watch Video Solution](#)

314. The ascending order of stability of the carbanion $\overset{-}{\text{C}}\text{H}_3$ (P), $\text{C}_6\text{H}_5\overset{-}{\text{C}}\text{H}_2$ (Q), $(\text{CH}_3)_2\overset{-}{\text{C}}\text{H}$ (R) and $\text{H}_2\overset{-}{\text{C}}-\text{CH}=\text{CH}_2$ (S) is

- A. P < R < S < Q
- B. R < P < S < Q
- C. R < P < Q < S
- D. P < R < Q < S

Answer: B

 [Watch Video Solution](#)

315. Which of the following has vacant orbitals, that can accept a lone pair of electron?

- A. electrophiles
- B. nucleophiles
- C. mesophiles
- D. free radicals

Answer: A

 [View Text Solution](#)

316. In which of the following reaction modification of carbon skeleton takes place ?

- A. Substitution
- B. Addition
- C. Rearrangement
- D. Elimination

Answer: C

 [View Text Solution](#)

317. C-F is the strongest among C-F, C-Cl, C-Br, C-I because

- A. the strongest bonds are formed by the overlap of orbitals of the same principle quantum number. In C-F the overlap involves orbitals of the same principle quantum number (second)
- B. F is the most electronegative among F, Cl, Br, I

C. F has the smallest size among the halides

D. 'F' is the least electronegative

Answer: B

 [View Text Solution](#)

318. Chemically similar compounds having the same functional group but differing by a CH_2 group in their molecular formula are known as

A. Isomers

B. Homologues

C. Allotropes

D. Polymers

Answer: B

 [Watch Video Solution](#)

319. Which of the following compounds has only secondary carbon atoms ?

A. Cyclohexane

B. Methylcyclopentane

C. 2-Methylpentane

D. Pentane

Answer: A

 [Watch Video Solution](#)

320. The IUPAC name for the compound

$\text{HC} \equiv \text{C} - \text{CH}_2 - \text{CH}_2 - \text{COOH}$ is

- A. 4-Pentyn-1-oic acid
- B. 1-Pentyn-4-oic acid
- C. Pentyn-1-oic acid
- D. None of the above

Answer: A

 [Watch Video Solution](#)

321. The IUPAC name for the given compound is

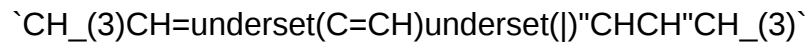
$\text{CH}_3\text{-C(O)-C(OH)(NH}_2\text{)-CH}_2\text{-COOH}$

- A. 2-Amino-3-hydroxy-4-pentanone-1-oic acid
- B. 4-Amino-3-hydroxy-2-oxopentanoic acid
- C. 2-Amino-3-hydroxy-4-oxopentanoic acid
- D. None of the above

Answer: C

 [Watch Video Solution](#)

322. The IUPAC name for the given compound is



- A. 4-Ethyl pent-2-ene
- B. 1-Ethyl-3-methyl but-2-ene
- C. 3-Methyl hex-4-en-1-yne
- D. 4-Methyl hex-2-en-5-yne

Answer: D

 [View Text Solution](#)

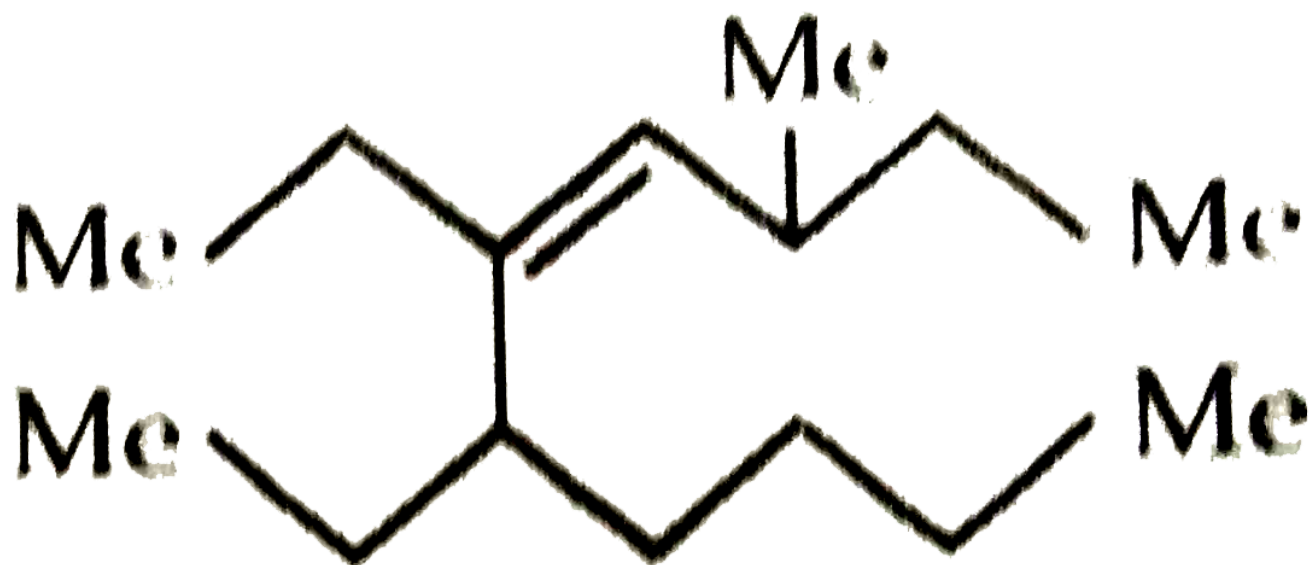
323. The structure of Hex-2,4-dien-1,6-dioic acid is

- A. $\text{HOOC} - \text{CH}=\text{CH}-\text{CH}=\text{CH}-\text{COOH}$
- B. $\text{HOOC} - \text{CH}_2-\text{CH}=\text{C}=\text{CH}-\text{COOH}$
- C. Both of the above
- D. None of the above

Answer: A

 [Watch Video Solution](#)

324. The correct IUPAC name of the compound

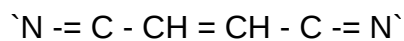


- A. 5,6-Diethyl-8-methyl-6-decene
- B. 5,6-Dimethyl-3-ethyl-4-decene
- C. 5,6-Methylethyl-4-decene
- D. 5,6-Diethyl-3-methyl-4-decene

Answer: D

[▶ Watch Video Solution](#)

325. The correct IUPAC name of

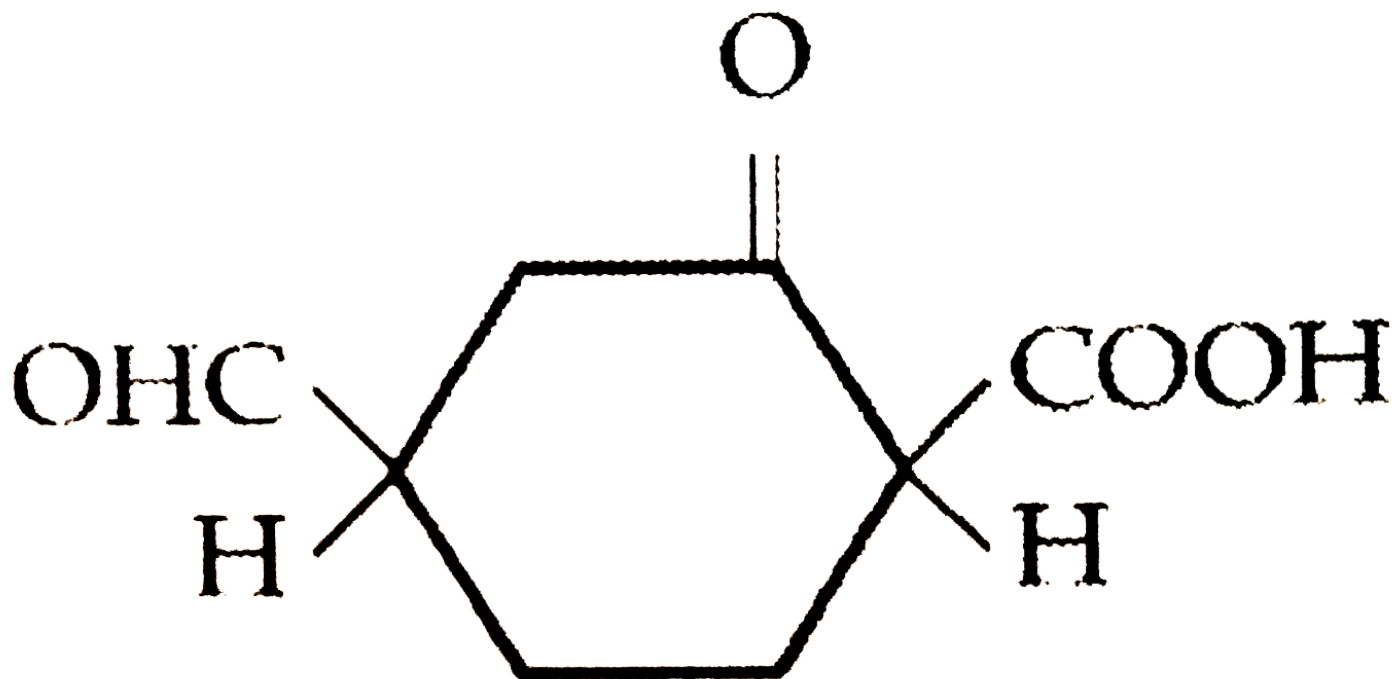


- A. 1,2-Dicyanoethene
- B. But-2-en-1,4-dinitrile
- C. Dibut-2-en-1,4-nitrile
- D. None of the above

Answer: B

[▶ Watch Video Solution](#)

326. Write the IUPAC of the following compound



- A. 2,4-dioxocyclohexanoic acid
- B. 2,4-dioxocycloheptanoic acid
- C. 4-formyl-2-oxocyclohexane-1-carboxylic acid
- D. 2,4-dioxocyclohexane-1-carboxylic acid

Answer: C

[▶ Watch Video Solution](#)

327. Resonance energy per benzene ring is maximum for

- A. Benzene
- B. Naphthalene
- C. Phenanthrene
- D. Anthracene

Answer: A

 [View Text Solution](#)

328. Which of the following correctly represents the +I-effect of the substituents ?

- A. $\text{O}^{(-)} \text{gt COO}^{(-)} \text{gt CR}_{(3)}$
- B. $\text{COO}^{(-)} \text{gt O}^{(-)} \text{gt CR}_{(3)}$
- C. $\text{O}^{(-)} \text{lt COO}^{(-)} \text{lt CR}_{(3)}$
- D. $\text{COO}^{(-)} \text{lt O}^{(-)} \text{lt CR}_{(3)}$

Answer: A

 [Watch Video Solution](#)

329. Which one of the following has the smallest, heat of hydrogenation per mole of the compound ?

- A. 1-Butene
- B. trans-2-Butene
- C. cis-2-Butene

D. 1,3-Butadiene

Answer: B

 [View Text Solution](#)

330. The increasing order of hyperconjugative effect of CH_3 -, C_2H_5 -, $(\text{CH}_3)_2\text{CH}$ - and $(\text{CH}_3)_3\text{C}$ - when one of these is attached to benzene ring is

A. CH_3 -, C_2H_5 -, $(\text{CH}_3)_2\text{CH}$ - and $(\text{CH}_3)_3\text{C}$ -

B. $(\text{CH}_3)_3\text{C}$ -, $(\text{CH}_2)\text{CH}$ -, CH_3 -, C_2H_5 -

C. $(\text{CH}_2)_2\text{CH}$ -, (CH_3) -, $\text{CH}_3\text{C}_2\text{H}_5$ -

D. None of the above

Answer: A

 [View Text Solution](#)

331. Delocalisation of electrons involving σ bonds is known as

A. Mesomeric effect

B. Tautomeric effect

C. Electromeric effect

D. Hyperconjugative effect

Answer: D

 [View Text Solution](#)

332. The number of possible structural isomers for a compound with the molecular formula C_7H_{16} is

- A. 8
- B. 9
- C. 10
- D. 12

Answer: B

 [View Text Solution](#)

333. C_7H_7Cl has number of structural isomers

- A. 2
- B. 5
- C. 3
- D. 4

Answer: D

 [Watch Video Solution](#)

334. The number of structural isomers for an aromatic compound C_7H_8O is

A. 2

B. 3

C. 4

D. 5

Answer: D

 [Watch Video Solution](#)

335. Zero inductive effect is exerted by:

A. C_6H_5^-

B. H

C. CH_3^-

D. Cl

Answer: B

 [Watch Video Solution](#)

336. Functional isomers are

A. Alcohols and ethers

B. Aldehydes and ketones

C. Cyanide and isocyanide

D. All of the above

Answer: D

 [Watch Video Solution](#)

337. The type of isomerism due to different types on alkyl groups on either side of the functional group of compounds $\text{CH}_3\text{CH}_2\text{COCH}_2\text{CH}_3$ and $\text{CH}_3\text{COC}_3\text{H}_7$ is referred as

- A. Metamerism
- B. Chain isomerism
- C. Functional isomerism
- D. Tautomerism

Answer: A

 [Watch Video Solution](#)

338. Resonance in benzene is accompanied by delocalisation of π electrons. Each π electron is attached with

- A. Four carbon electrons
- B. Two carbon electrons
- C. Three carbon electrons
- D. None of the above

Answer: D

 [View Text Solution](#)

339. It is very difficult to esterify $\text{R}_3\text{C-COOH}$ because of

- A. Steric inhibition
- B. Delocalisation
- C. Inductive effect
- D. Hyper conjugation

Answer: A

 [View Text Solution](#)

340. Which of the following statement is false about resonance?

- A. It increases the stability of a molecule
- B. It leads to similar type of bonds
- C. It increases reactivity of the molecule
- D. It decreases reactivity of the molecule

Answer: C

 [View Text Solution](#)

341. In geometrical isomerism, boiling points are more for

- A. Cis isomer
- B. Trans isomer
- C. Both have equal boiling
- D. None of the above

Answer: A

 [View Text Solution](#)

342. Amongst the following the compound having the most acidic alpha hydrogen is

- A. H_3CCHO
- B. H_3COCH_3
- C. $\text{CH}_3\text{COCH}_2\text{CHO}$
- D. $\text{H}_3\text{CCOCH}_2\text{COCH}_3$

Answer: C

 [View Text Solution](#)

343. Correct order of nucleophilicity is

- A. CH_3^- It NH_2^- It OH^- It F^-
- B. F^- It OH^- It CH_3^- It NH_2^-

C. $\text{OH}^{\ominus} \text{lt NH}_2^{\ominus} \text{lt F}^{\ominus} \text{lt CH}_3^{\ominus}$

D. $\text{F}^{\ominus} \text{lt OH}^{\ominus} \text{lt NH}_2^{\ominus} \text{lt CH}_3^{\ominus}$

Answer: D

 [Watch Video Solution](#)

344. The most stable free radical is

A. $\text{C}_6\text{H}_5\text{-overset(C}_6\text{H}_5\text{)overset{()underset(C}_6\text{H}_5\text{)underset{()}(C^{\oplus})}$

B. $\text{CH}_3\text{-overset(CH}_3\text{)overset{()underset(CH}_3\text{)underset{()}(C^{\oplus})}$

C. $\text{CH}_3\text{CH}_2\text{CH}^{\oplus}\text{CH}_3$

D. $\text{CH}_3\text{CH}_2\text{CH}_2\text{C}^{\oplus}\text{H}_2$

Answer: A

 [View Text Solution](#)

345. Photolysis of diazomethane gives

A. Methyl free radical

B. Methylene carbene

C. Methyl carbanion

D. Methyl carbonium ion

Answer: B

 Watch Video Solution

346. Match List-I with List-2 and select the correct answer using the codes given below the lists

List I	List II
(A) $\text{C}_6\text{H}_5\overset{+}{\text{C}}\text{H}_2$	(1) Carbene
(B) $\overset{\ominus}{\text{C}}\text{H}_2 - \text{CHO}$	(2) Free radical
(C) $\text{C}_2\text{H}_5^\ominus$	(3) Carbanion
(D) $:\text{CH}_2$	(4) Carbonium ion

A. $\{(A,B,C,D),(1,2,4,3)\}$

B. $\{(A,B,C,D),(2,3,4,1)\}$

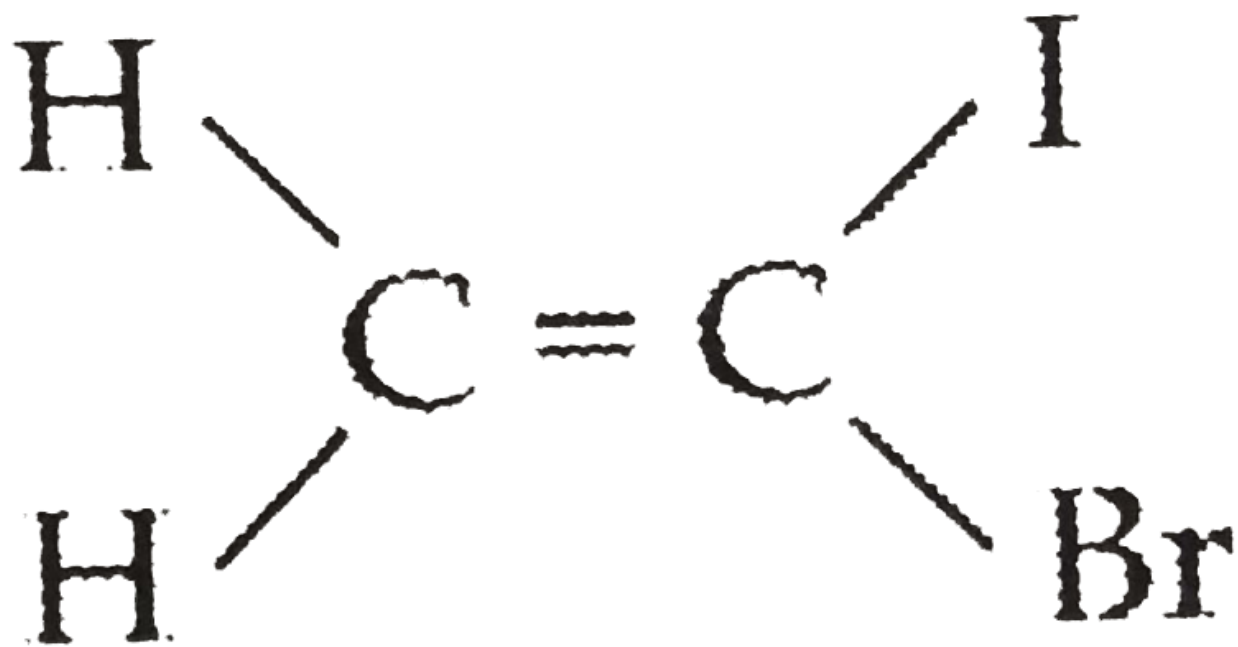
C. $\{(A,B,C,D),(1,3,4,2)\}$

D. $\{(A,B,C,D),(4,3,2,1)\}$

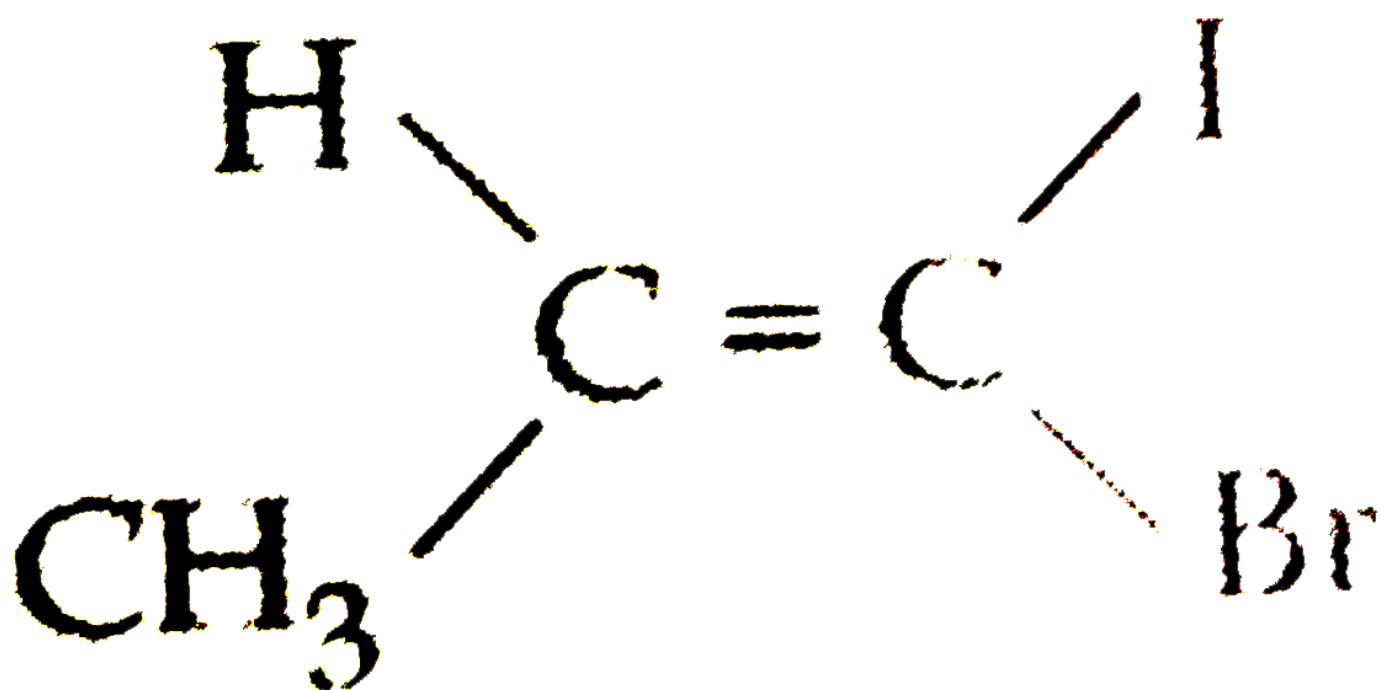
Answer: D

 Watch Video Solution

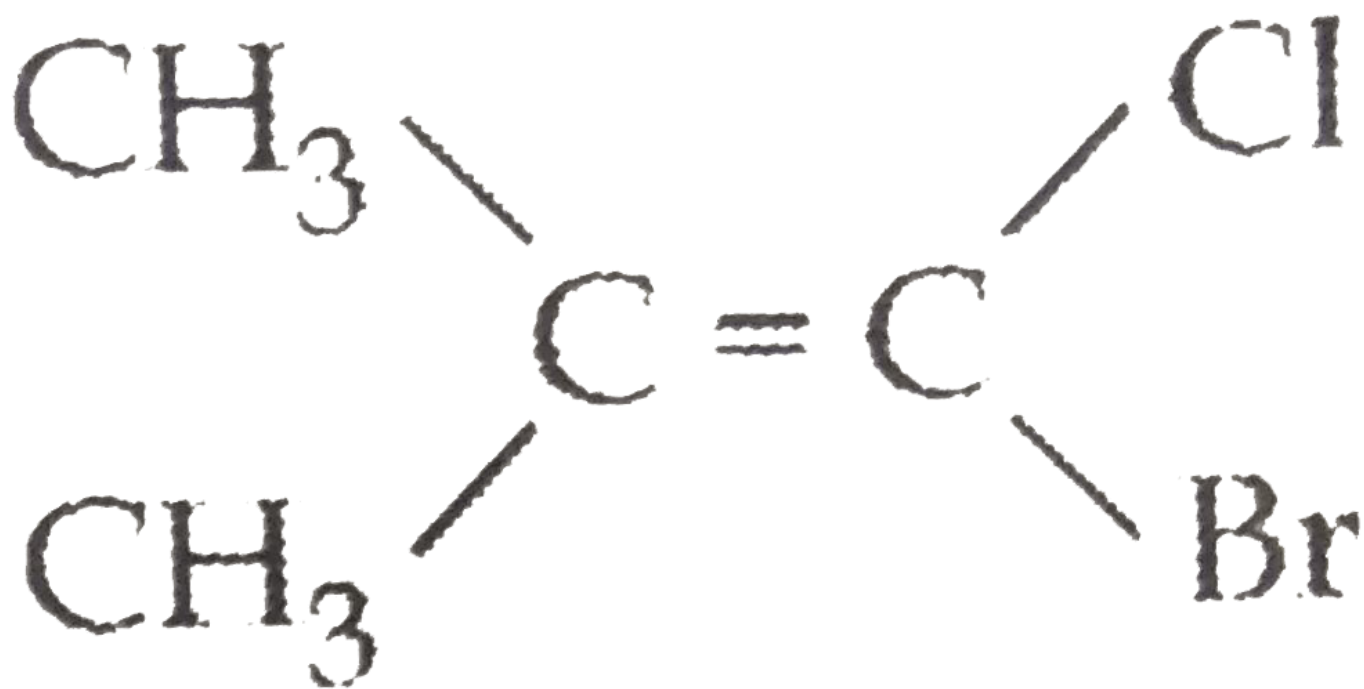
347. Geometrical isomerism is shown by



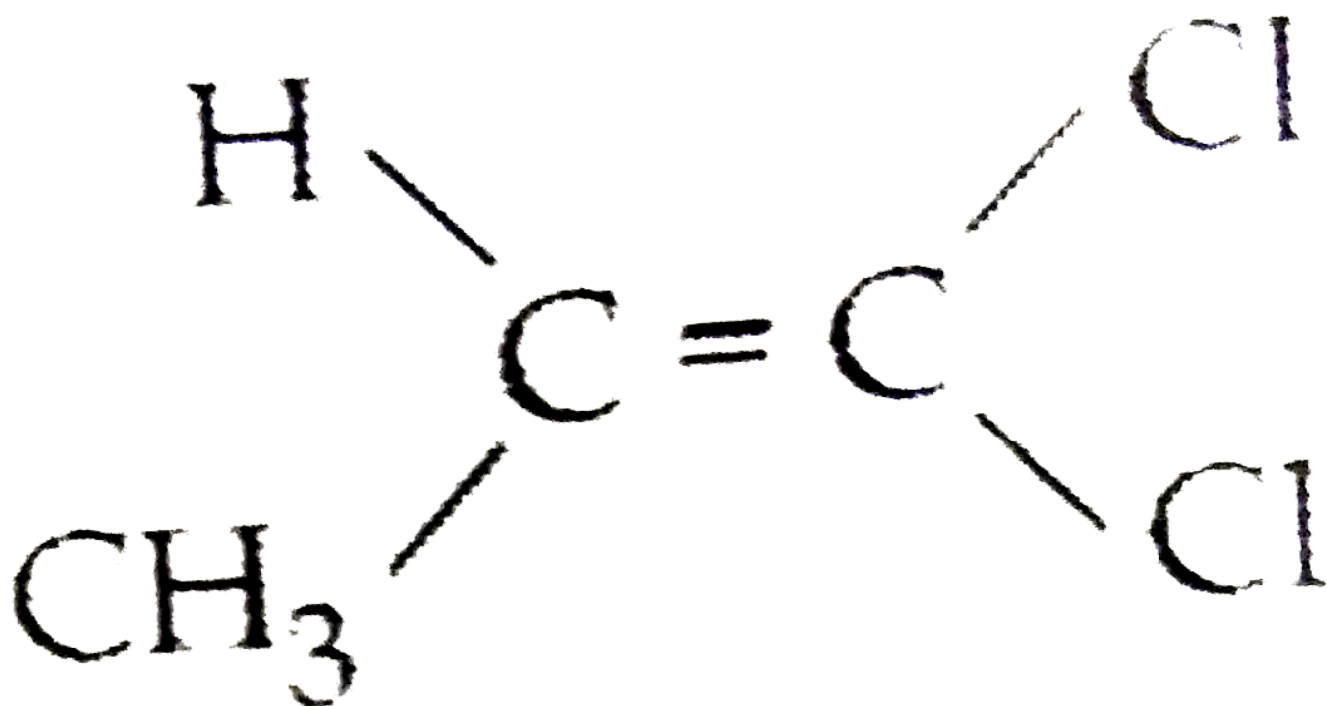
A.



B.



C.



D.

Answer: B

 Watch Video Solution

348. Which of the following pairs are tautomers ?

- A. $\text{CH}_3\text{CH}_2\text{CHO}$ and CH_3COCH_3
- B. CH_3CHO and $\text{CH}_2=\text{CHOH}$
- C. $\text{C}_2\text{H}_5\text{COC}_2\text{H}_5$ and $\text{CH}_3\text{COC}_3\text{H}_7$
- D. $\text{CH}_3\text{-CH=CH-CH}_3$ and $\text{CH}_3\text{-CH}_2\text{-CH=CH}_2$

Answer: B

 [View Text Solution](#)

349. Stability is more for the intermediate

- A. $\text{C}_6\text{H}_5\text{C}^+\text{H}_2$
- B. $\text{C}_6\text{H}_{11}\text{C}^+\text{H}_2$
- C. C^+H_3
- D. $\text{CH}_3\text{C}^+\text{H}_2$

Answer: A

 [View Text Solution](#)

350. Ring nitration is more in

- A. $\text{C}_6\text{H}_5(\text{CH}_3)_3$

B. $\text{C}_6\text{H}_5\text{CH}_3$

C. $\text{C}_6\text{H}_5\text{CH}_2\text{CH}_3$

D. $\text{C}_6\text{H}_5\text{CH}(\text{CH}_3)_2$

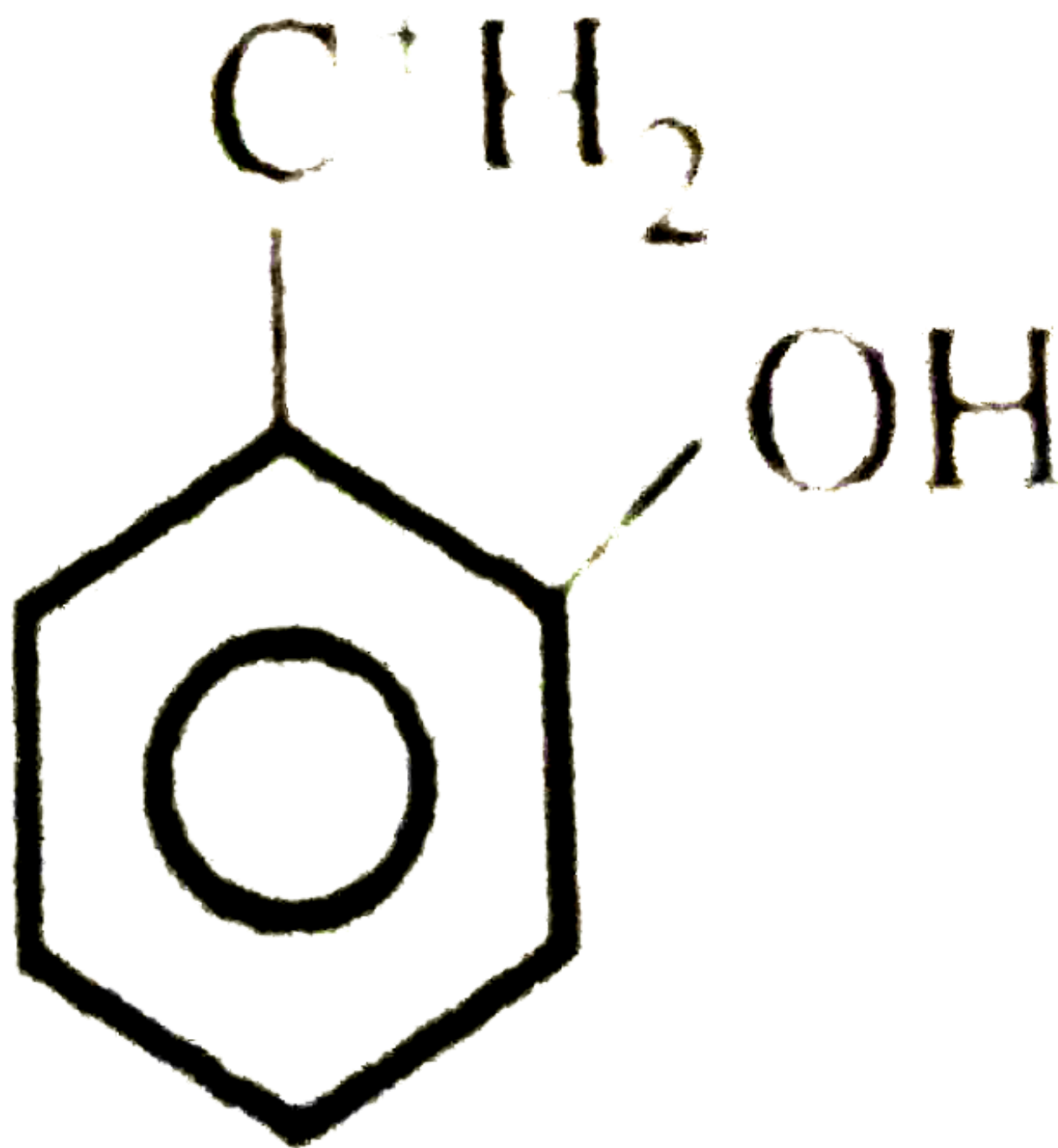
Answer: B

 [View Text Solution](#)

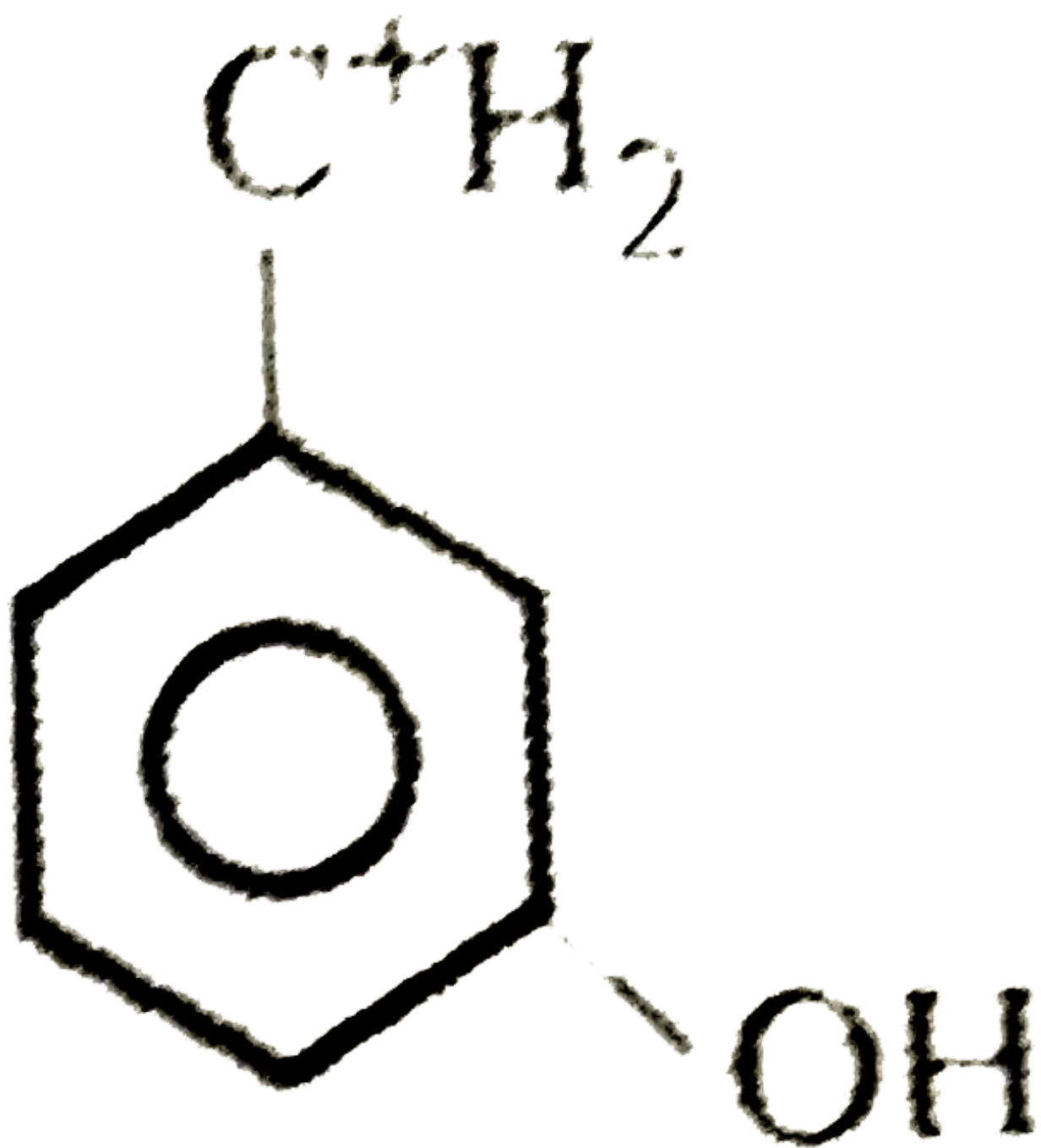
351. The least stable carbonium ion is



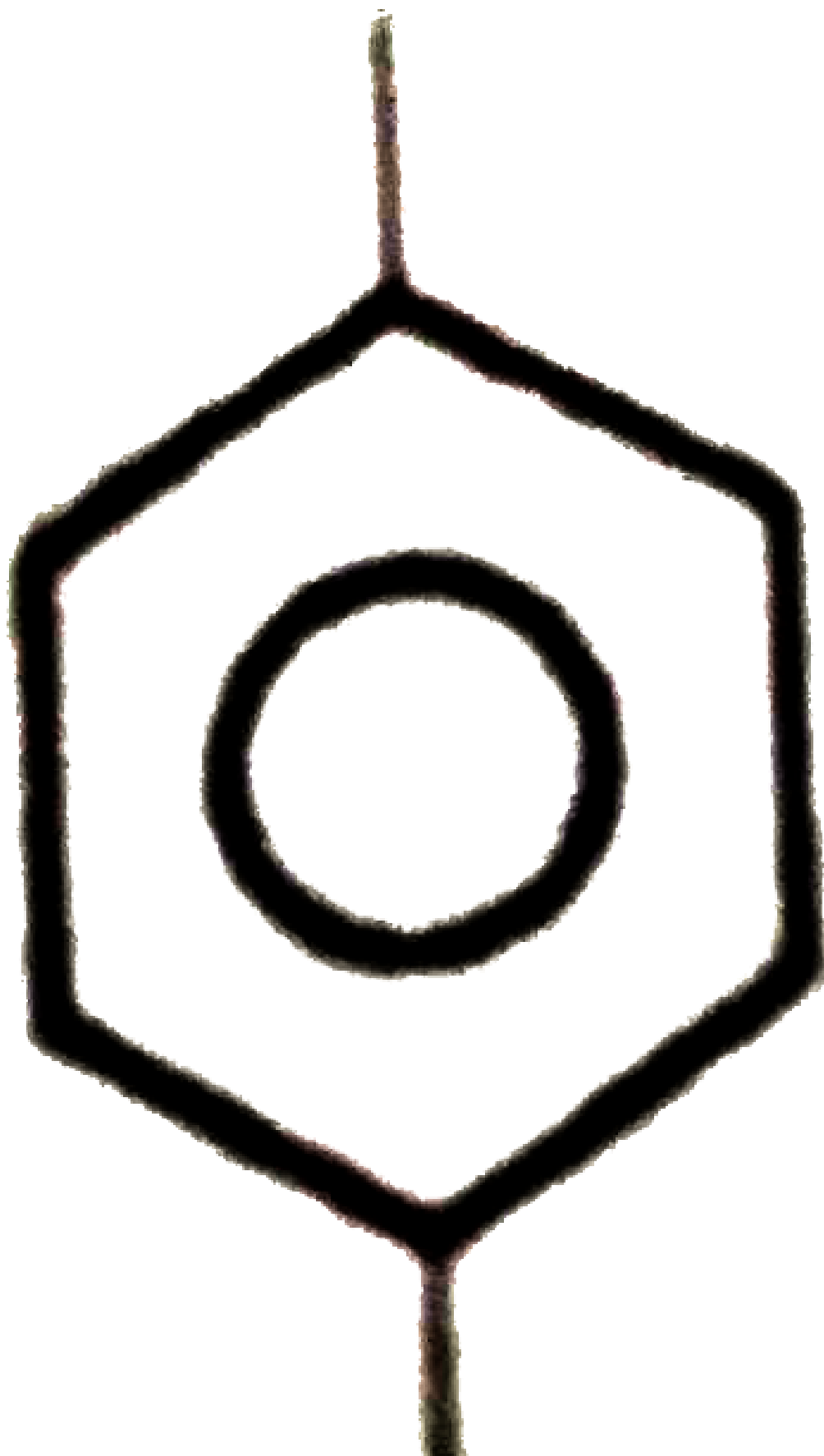
A.

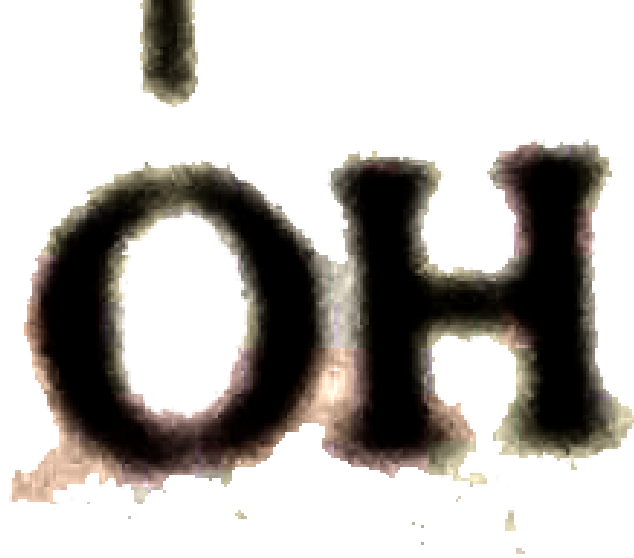


B.



c.





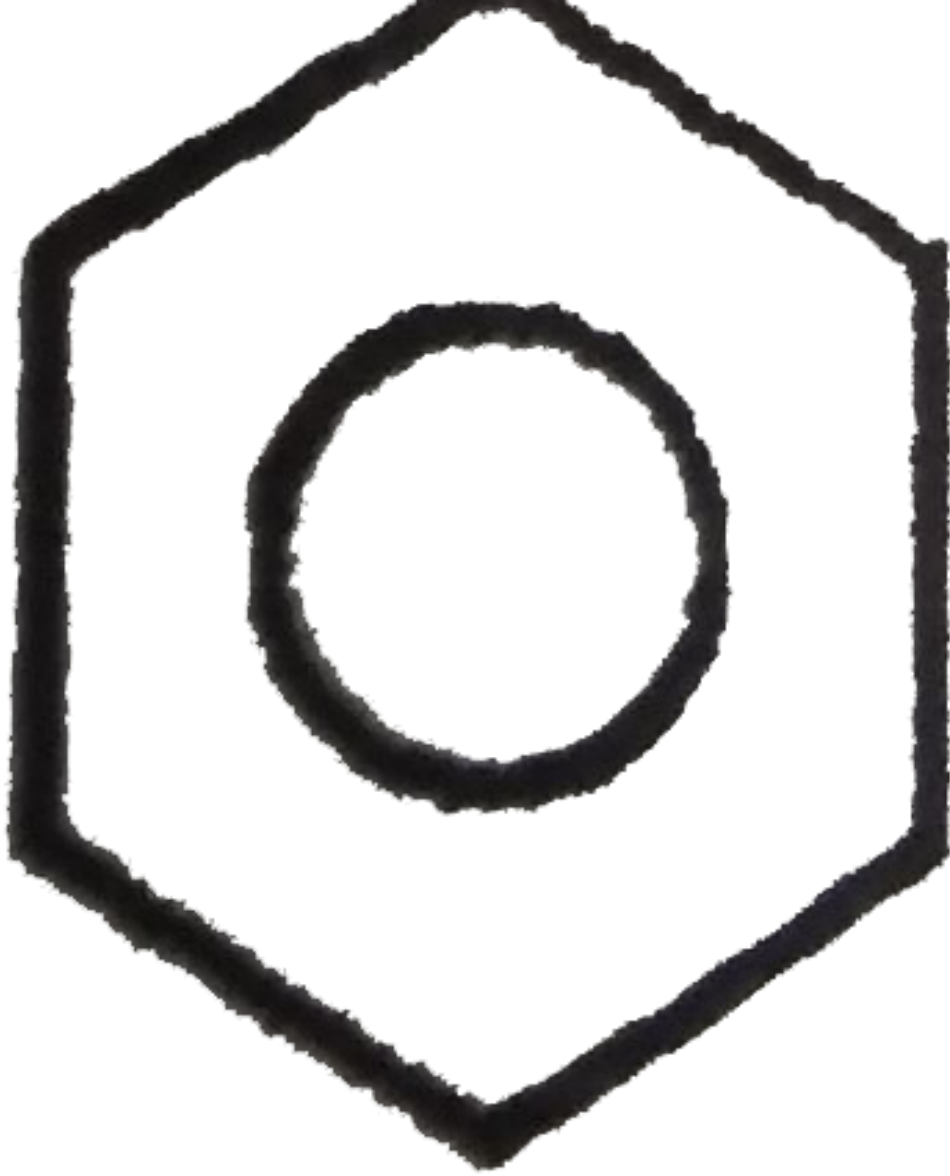
D.

Answer: C

[View Text Solution](#)

352. The carbon atom carrying halogen atom is more electron deficient in

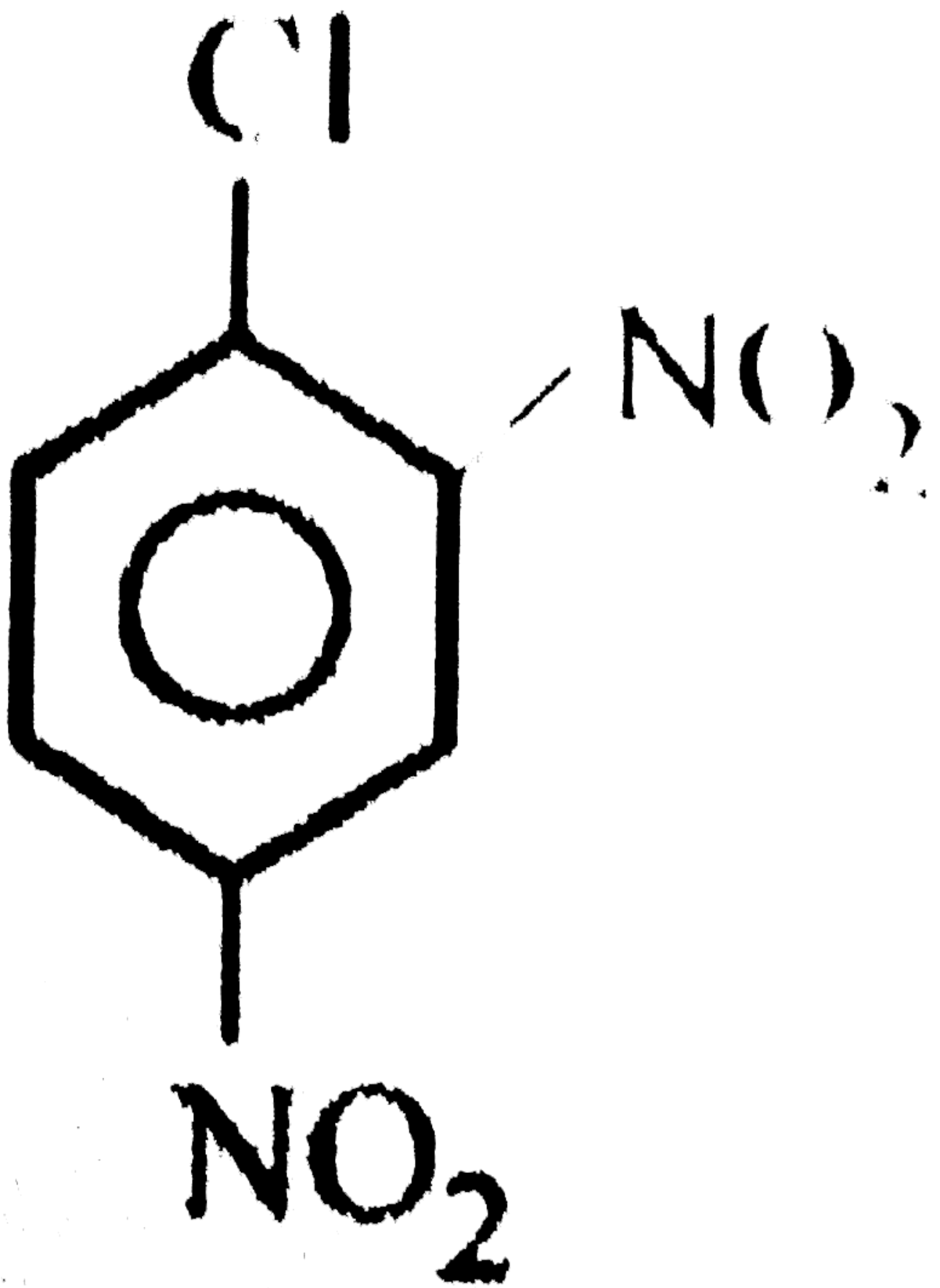




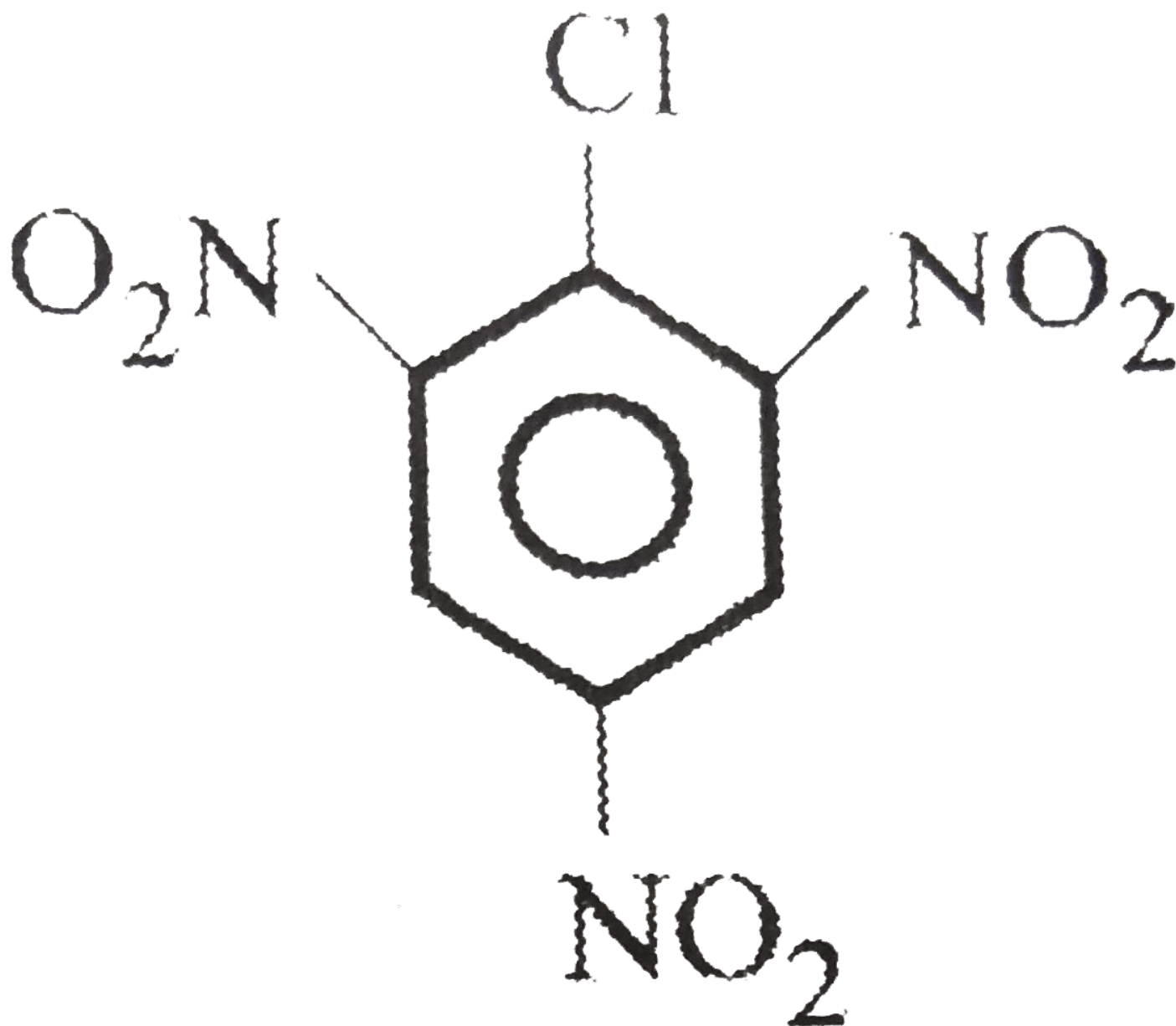
A.



B.



c.



D.

Answer: D

[View Text Solution](#)

353. Generally it is more difficult to purify organic compounds than inorganic compounds because

- A. They are quite unstable
- B. They are more volatile

C. Organic compounds have low solubility

D. Physical constants for organic compounds and the impurities associated with them are very close to each other

Answer: D

 [View Text Solution](#)

354. The processes commonly used for the separation and purification of organic substances are crystallisation, sublimation and

A. Stearn distillation

B. Fractional distillation

C. Extraction with solvents

D. All of the above

Answer: D

 [View Text Solution](#)

355. In Lassaigne's test for the detection of nitrogen, the blue colouration is due to the formation of

A. Ferric ferrocyanide

B. Potassium ferrocyanide

C. Sodium ferrocyanide

D. Sodium cyanide

Answer: A

 [Watch Video Solution](#)

356. When an organic compound containing 1 phosphorus is fused with fusion mixture, it gives is

A. Na_2HPO_4

B. Na_3PO_4

C. NaH_2PO_4

D. Na_3PO_3

Answer: B

 [Watch Video Solution](#)

357. A compound of carbon, hydrogen and nitrogen contains three elements in the respective ratio of 9 : 1 : 3.5 grams. The empirical formula of the compound is

A. $\text{C}_2\text{H}_4\text{N}$

B. $\text{C}_3\text{H}_4\text{N}$

C. $\text{C}_3\text{H}_6\text{N}$

D. $\text{C}_2\text{H}_6\text{N}$

Answer: B

 [Watch Video Solution](#)

358. In the estimation of sulphur organic compound on treating with conc. HNO_3 is converted to

- A. SO_2
- B. H_2S
- C. H_2SO_3
- D. H_2SO_4

Answer: D

 [Watch Video Solution](#)

359. The catalyst used in Kjeldahl's method for the estimation of nitrogen is:

- A. Sodium
- B. Magnesium
- C. Mercury
- D. Copper

Answer: C

 [Watch Video Solution](#)

360. In Kjeldahl's method for the estimation of nitrogen, the formula used is

A. % percentage of N $= \frac{1.4 \times V \times W}{N}$

B. % percentage of N $= \frac{1.4 \times N \times W}{V}$

C. % percentage of N $= \frac{V \times N \times W}{1.4}$

D. % percentage of N $= \frac{1.4 \times N \times V}{W}$

Answer: D

 [View Text Solution](#)

361. 0.24 gm of an organic substance gave 45.6 c.c. of nitrogen at N.T.P. The percentage of nitrogen is

A. 63.6%

B. 23.8%

C. 53.6%

D. 53.6%

Answer: B

 [View Text Solution](#)

362. There are several criteria for purity of organic compounds. Out of these which one is considered best?

A. Melting point

B. Mixed melting point

C. Microscopic examination

D. Colour

Answer: B

 [Watch Video Solution](#)

363. A mixture of o-nitrophenol and p- nitrophenol can be separated by

- A. Sublimation
- B. Steam distillation
- C. Fractional crystallisation
- D. Distillation

Answer: B

 [Watch Video Solution](#)

364. 59 g of an amide obtained from a carboxylic acid, RCOOH , upon heating with alkali liberated, 17 g of ammonia. The acid is '

- A. Formic acid
- B. Acetic acid
- C. Propionic acid
- D. Benzoic acid

Answer: B

 [Watch Video Solution](#)

365. In the estimation of nitrogen by Durna's method 1.18 g of an organic compound gave 224 mL of N_2 at NTP. The percentage of nitrogen in the compound is

- A. 20
- B. 11.8
- C. 47.5
- D. 23.7

Answer: D

 [View Text Solution](#)

366. A pure crystalline substance, on being heated gradually first a turbid looking liquid and then the turbid liquid completely disappears. This behaviour is the characteristic of substances forming

- A. Liquid crystals
- B. Isomeric crystals
- C. Allotropic crystals
- D. Isomorphous crystals

Answer: A

 [Watch Video Solution](#)

367. When 10 gm of $\text{BaCl}_2 \cdot x\text{H}_2\text{O}$ are heated, the residue of anhydrous BaCl_2 weighs 8.53 gm.

The value of x is

- A. 1
- B. 2
- C. 3
- D. 4

Answer: B

 [View Text Solution](#)

368. A gaseous compound is composed of 85.7% by mass carbon and 14.3% by mass hydrogen. Its density is 2.28 g/litre at 300 K and 1.0 atm pressure. Determine the molecular formula of the compound.

- A. CH_4
- B. C_2H_6
- C. C_6H_6
- D. C_4H_8

Answer: D

 [Watch Video Solution](#)

369. A hydrocarbon contains, C = 82.66%, H = 17.34%. The density of the vapour is 0.2308 g/litre at 30°C and 75 torr. The molecular formula of the compound is

- A. C_4H_{10}
- B. C_6H_6
- C. C_2H_2
- D. CH_4

Answer: A

 [Watch Video Solution](#)

370. The volume of acetylene gas produced at 25°C and 0.950 atm. pressure from calcium carbide by the reaction 128 g of calcium carbide with 45 g of water is

- A. 3.22 litre
- B. 32.2 litre
- C. 16.1 litre
- D. None of these

Answer: B

 [View Text Solution](#)

371. A 20 mL mixture of CO, CH_4 , and Helium (He) gases is exploded by an electric discharge at room temperature with excess of oxygen. The volume contraction is found to be 13 mL. A further contraction of 14

mL occurs when the residual gas is treated with KOH solution. Find out the composition of the gaseous mixture in terms of volume percentage.

- A. $\text{CO} = 10 \text{ cm}^3$, $\text{CH}_4 = 6 \text{ cm}^3$ and $\text{He} = 4 \text{ cm}^3$
- B. $\text{CO} = 10 \text{ cm}^3$, $\text{CH}_4 = 4 \text{ cm}^3$ and $\text{He} = 6 \text{ cm}^3$
- C. $\text{CO} = 6 \text{ cm}^3$, $\text{CH}_4 = 10 \text{ cm}^3$ and $\text{He} = 4 \text{ cm}^3$
- D. $\text{CO} = 4 \text{ cm}^3$, $\text{CH}_4 = 6 \text{ cm}^3$ and $\text{He} = 10 \text{ cm}^3$

Answer: B

 [Watch Video Solution](#)

372. The desiccants used for absorbing water during Liebig's method for estimation of carbon and hydrogen are

- A. "Anhyd". CaCl_2
- B. "Anhyd" Na_2SO_4
- C. $\text{MgSO}_4 \cdot 7\text{H}_2\text{O}$
- D. $\text{Mg}(\text{ClO}_4)_2$

Answer: B

 [Watch Video Solution](#)

373. The correct decreasing order of priority for the functional groups of organic compounds in the IUPAC system of nomenclature is

A. $-\text{SO}_3\text{H}$, $-\text{COOH}$, $-\text{CONH}_2$, $-\text{CHO}$

B. $-\text{CHO}$, $-\text{COOH}$, $-\text{SO}_3\text{H}$, $-\text{CONH}_2$

C. $-\text{CONH}_2$, $-\text{CHO}$, SO_3H , $-\text{COOH}$

D. $-\text{COOH}$, $-\text{SO}_3\text{H}$, $-\text{CONH}_2$, $-\text{CHO}$

Answer: D

 [Watch Video Solution](#)

374. Which one of the following IUPAC name is incorrect ?

A. 2-methyle-3-ethy1 pentane

B. 2-ethyle-3-methy1 pentane

C. 3-ethyle-3-methy1 pentane

D. 3-methyle-2-ethy1 pentane

Answer: C

 [Watch Video Solution](#)

375. What is the correct IUPAC name for the following compound?

$\text{CH}_3(\text{CH}_2)_4\text{CH}(\text{CH}_3)\text{CH}(\text{CH}_2\text{CH}_3)\text{CH}_3$

(C)- $\text{CH}_2\text{CH}_2\text{CH}_3$

A. 3, 4-Dimethyl-3-n-propyl nonane

B. 6, 7-Dimethyl-2-n-propyl nonane

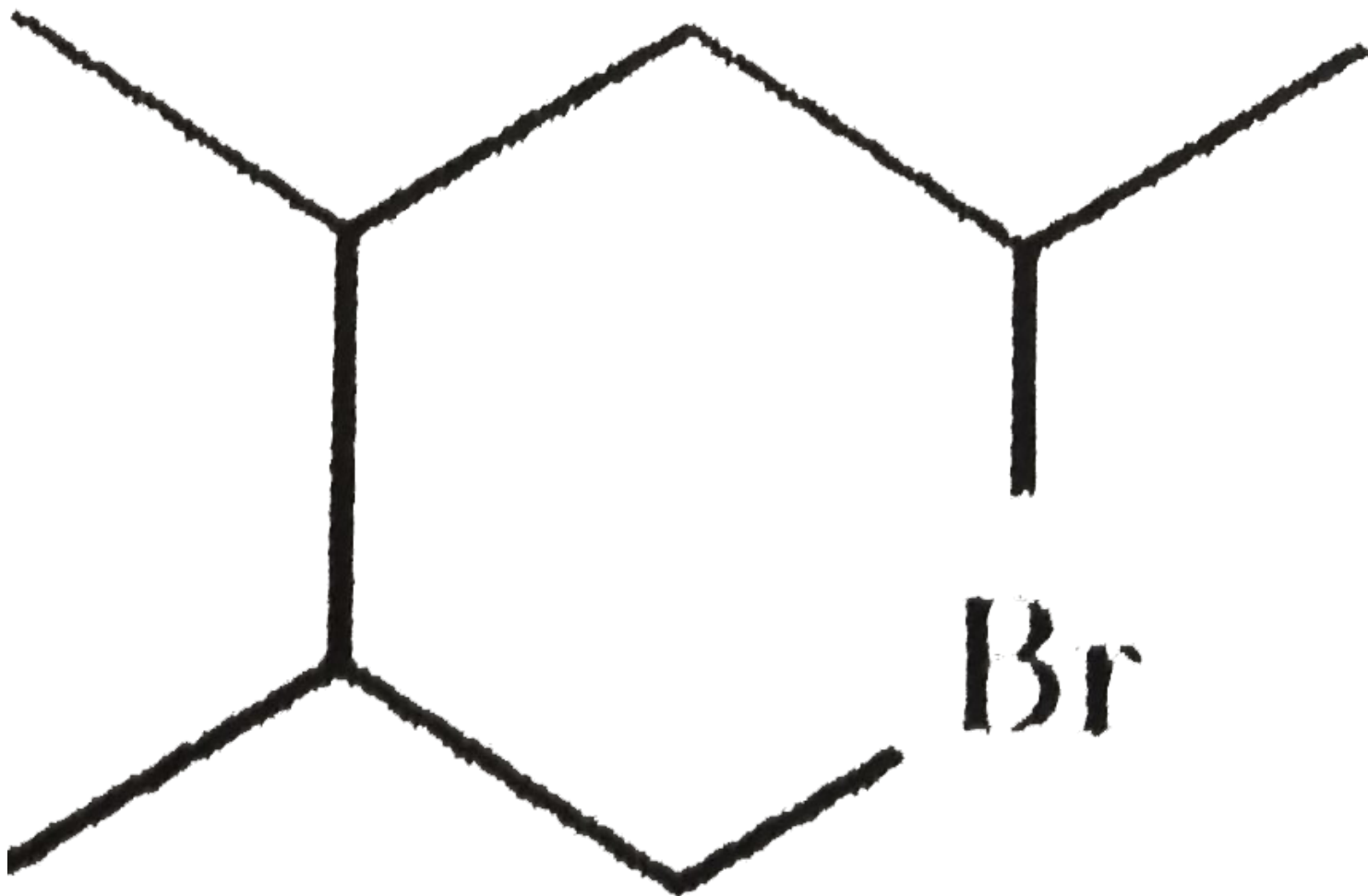
C. 6, 7-Dimethyl-7-ethyl decane

D. 4-Ethyl-4,5-dimethyl decane

Answer: D

[Watch Video Solution](#)

376. The IUPAC name of



A. 2-bromo-4-isopropylpentane

B. 2, 3-dimethyl-5-bromohexane

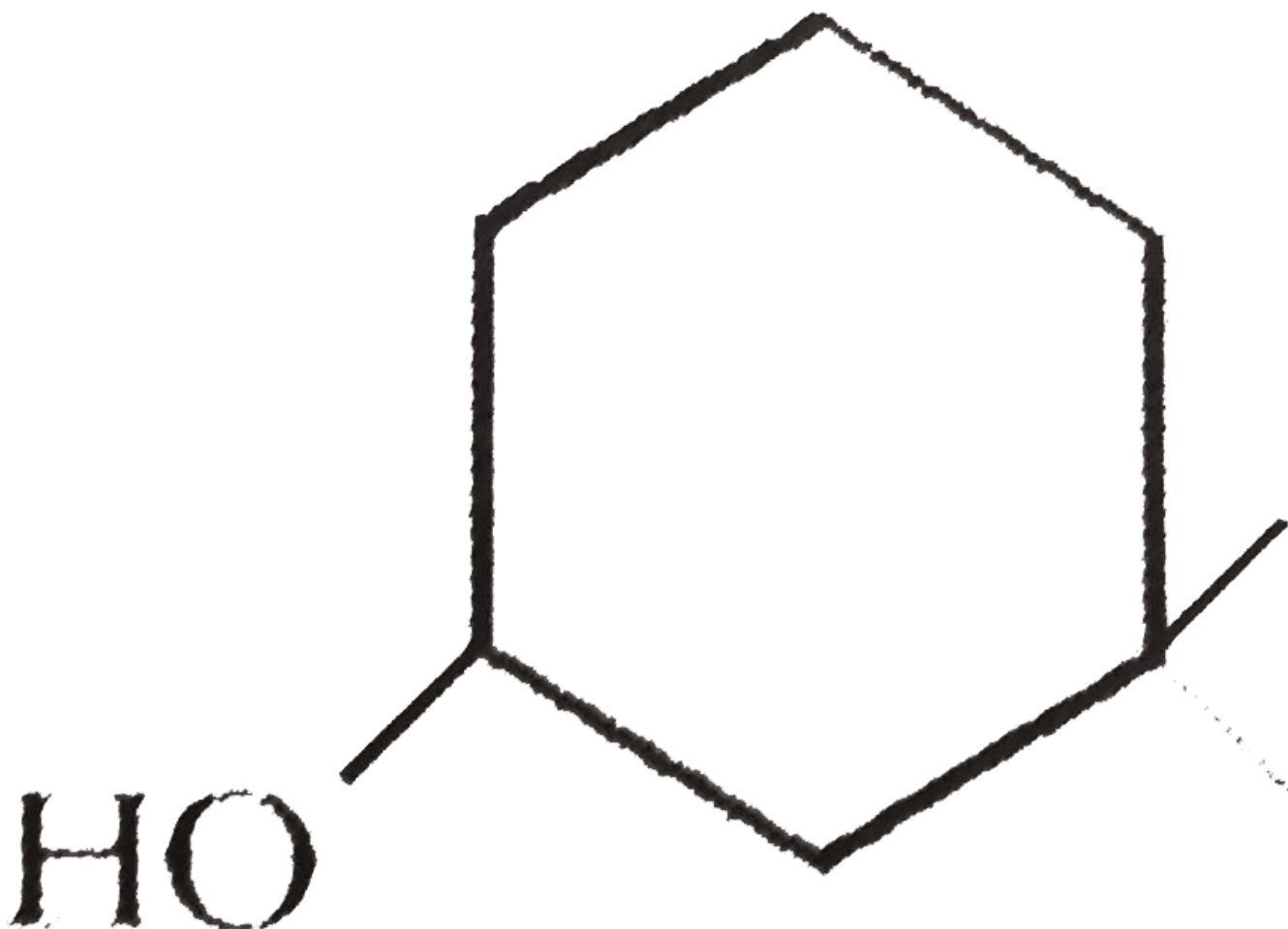
C. 2-bromo-4, 5-dimethylhexane

D. 5-bromo-2, 3-dimethylhexane

Answer: B

[▶ Watch Video Solution](#)

377. The IUPAC name of the compound ,



A. 3,3-dimethyl-1-hydroxy cyclohexane

B. 1, 1-dimethyl-3-hydroxy cyclohexane

C. 3,3-dimethyl-1-cyclohexanol

D. 1,1-dimethyl-3-cyclohexanol

Answer: C

 [Watch Video Solution](#)

378. How many σ and π bonds are present in $\text{HC}=\text{C}-\text{CH}=\text{CH}-\text{CH}_3$?

A. $9\sigma, 4\pi$

B. $10\sigma, 3\pi$

C. $6\sigma, 6\pi$

D. $5\sigma, 5\pi$

Answer: B

 [Watch Video Solution](#)

379. Which type of hybridisation of each carbon is there in the compound ?

$\text{CH}_3-\text{CH}=\text{CH}-\text{CN}$

A. sp^3, sp^2, sp^2, sp

B. sp^3, sp^2, sp^2, sp^3

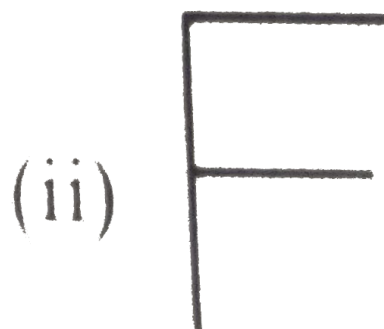
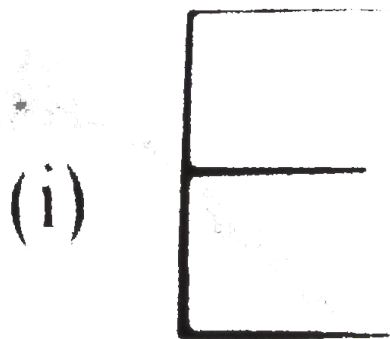
C. sp^3, sp^2, sp^3, sp^3

D. sp^3 , sp^2 , sp , sp^3

Answer: A

[▶ Watch Video Solution](#)

380. IUPAC names of the given structures are



- A. (i) hexane, (ii) 3 - methylbutane
- B. (i) isopentane, (ii) 2,2-dimethylbutane
- C. (i) 3 - ethylbutane, (ii) isopentane
- D. (i) 3 - methylpentane, (ii) 2-methylbutane

Answer: D

[▶ Watch Video Solution](#)

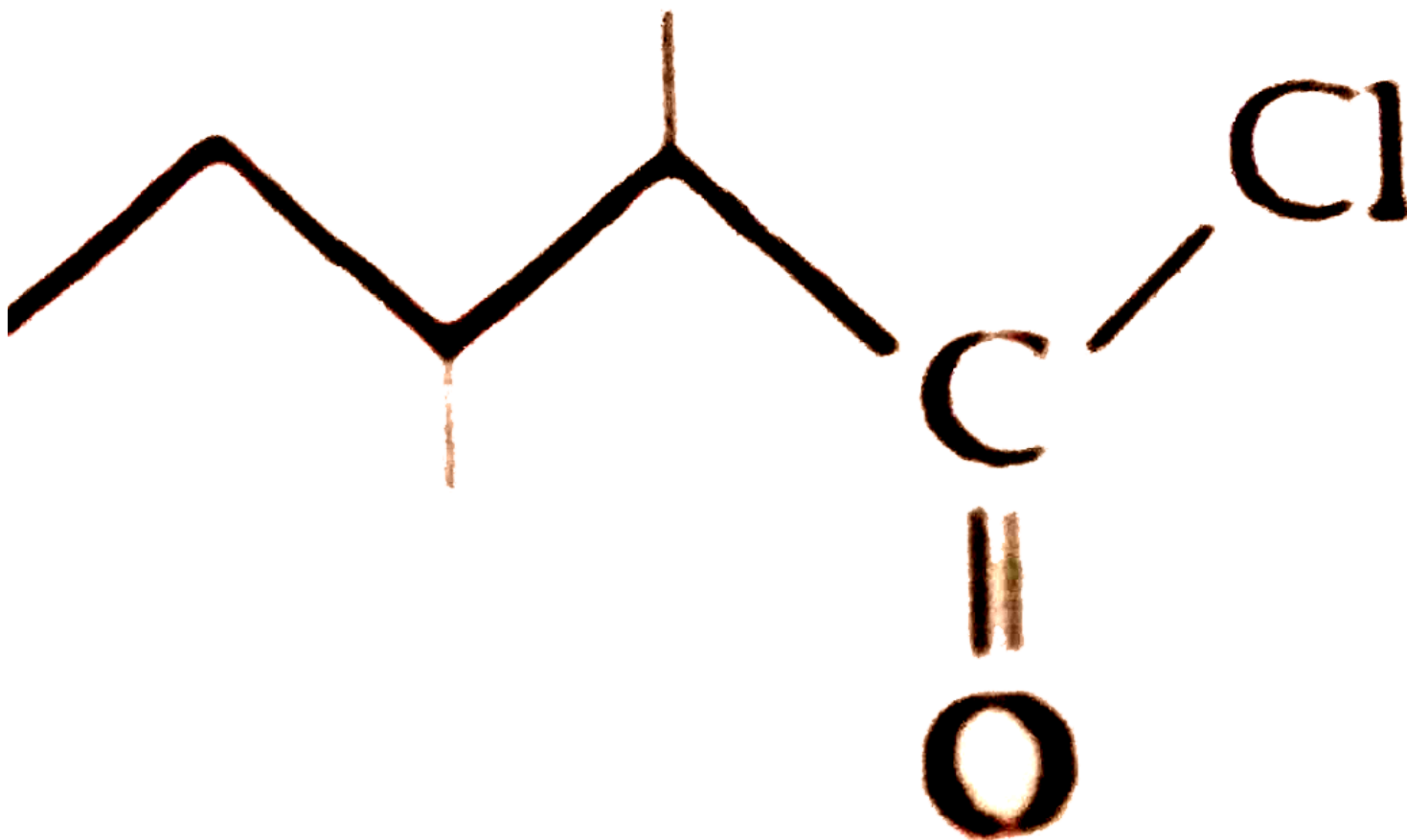
381.

The

IUPAC

name

of

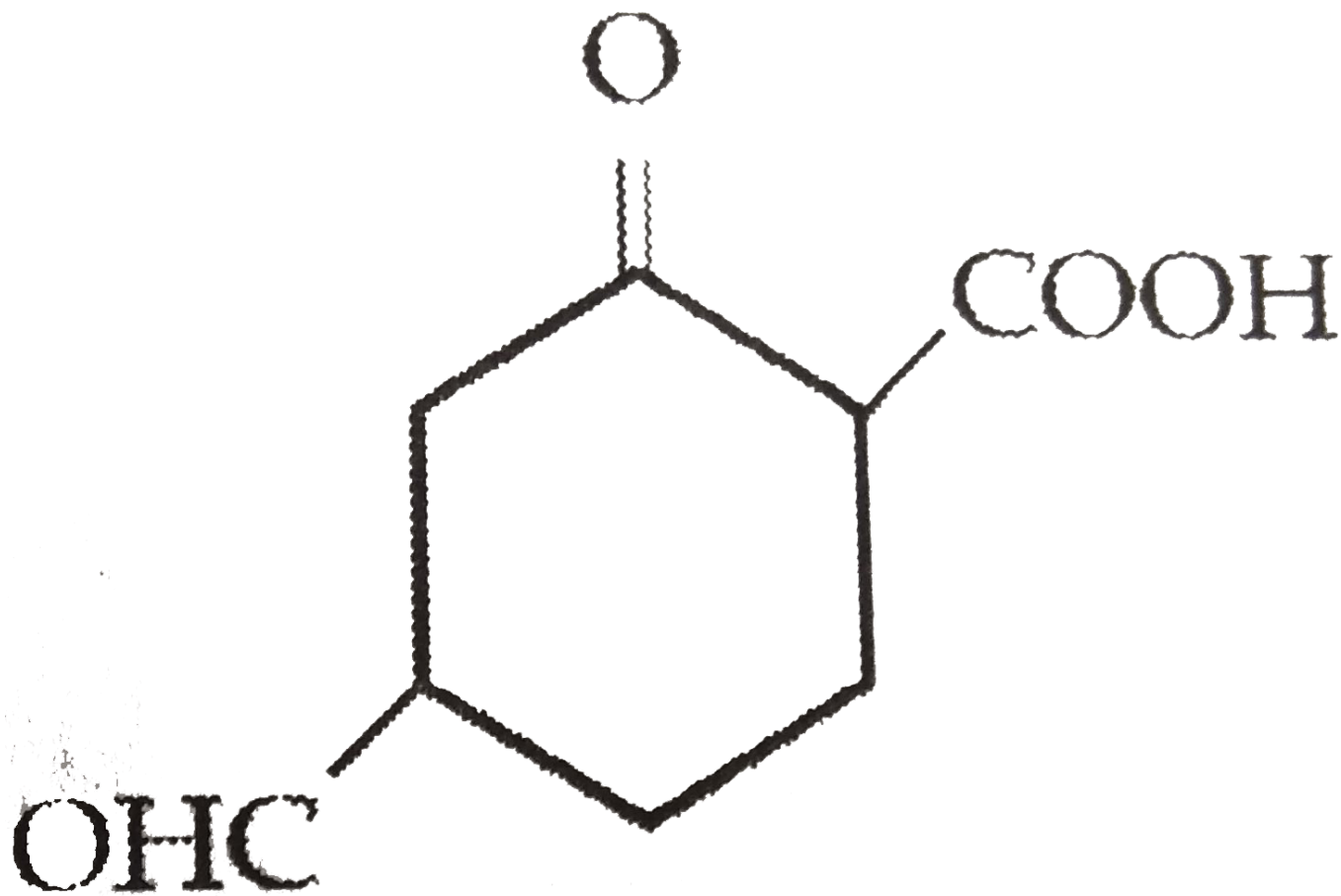


is

- A. 1-chloro-1-oxo-2,3-dimethylpentane
- B. 2-ethyl-3-methylbutanoyl chloride
- C. 2, 3-dimethylpentanoyl chloride
- D. 3,4-dimethylpentanoyl chloride

Answer: C[▶ Watch Video Solution](#)

382. The correct IUPAC name of the compound



is

- A. 4-formyl-2-oxocyclohexanecarboxylic acid
- B. 4-carboxy-2-oxocyclohexanal
- C. 4-carboxy-1-formylcyclohexanone
- D. 2-carboxy-5-formyl-1-oxocyclohexane

Answer: A

[▶ Watch Video Solution](#)

383. The number of hyperconjugating structures shown by the carbocations are given below. Which one is not correctly matched?

- A. NH_2^- , NO_2^+ , H_2O , NH_3
- B. F^- , OH^- , NH_3 , SO_3
- C. NO_2^+ , AlCl_3 , SO_3 , CH_3CO
- D. NH_3 , BF_3 , AlCl_3 , H_2O

Answer: C

 [View Text Solution](#)

386. Which of the following represents the given mode of hybridisation $sp^2 - sp^2 - sp - sp$ from left to right ?

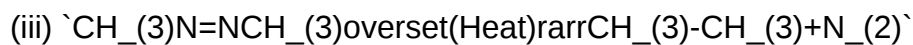
- A. $\text{H}_2\text{C} = \text{CH} - \text{C} \equiv \text{H}$
- B. $\text{HC} = \text{C} - \text{CH} = \text{CH}_2$
- C. $\text{H}_3\text{C} - \text{CH} = \text{CH} - \text{CH}_3$
- D. $\text{H}_2\text{C} = \text{CH} - \text{CH} = \text{CH}_2$

Answer: A

 [Watch Video Solution](#)

387. Identify the type of reaction.

- (i) $\text{HCHO} + \text{HCN} \rightarrow \text{CH}_2(\text{OH})\text{CN}$
- (ii) $\text{CH}_3\text{Cl} + \text{KOH}(\text{aq}) \rightarrow \text{CH}_3\text{OH} + \text{KCl}$



- A. (i) Substitution, (ii) Addition, (iii) Elimination, (iv) Elimination
- B. (i) Addition, (ii) Substitution, (iii) Decomposition, (iv) Elimination
- C. (i) Addition, (ii) Addition, (iii) Substitution, (iv) Substitution
- D. (i) Substitution, (ii) Elimination, (iii) Addition, (iv) Substitution

Answer: B

 [View Text Solution](#)

388. The percentage of oxygen in heavy water is

- A. 60
- B. 50
- C. 80
- D. 80.9

Answer: C

 [Watch Video Solution](#)

389. In the Kjeldahl's method for estimation of nitrogen present in a soil sample, ammonia evolved from 0.75 g of sample neutralized 10 mL of 1 M H_2SO_4 . The percentage of nitrogen in the soil is

A. 37.33

B. 45.33

C. 35.33

D. 43.33

Answer: A

 [Watch Video Solution](#)

390. For the estimation of nitrogen, 1.4 g of an organic compound was digested by Kjeldahl's method and the evolved ammonia was absorbed in 60 mL of $\frac{M}{10}$ sulphuric acid. The unreacted acid required 20 mL of $\frac{M}{10}$ sodium hydroxide for complete neutralisation. The percentage of nitrogen in the compound is

A. 3%

B. 5%

C. 6%

D. 10%

Answer: D

 [Watch Video Solution](#)

Test your grasp

1. Boiling point of a liquid depends upon

A. Temperature

B. Volume

C. Pressure

D. Moisture

Answer: C

 [View Text Solution](#)

2. Sodium nitroprusside when added to an alkaline solution of sulphide ions produces

A. Red colouration

B. Blue colouration

C. Violet colouration

D. Brown colouration

Answer: C

 [Watch Video Solution](#)

3. In the estimation of nitrogen by Duma's method 1.18 g of an organic compound gave 224 ml of N_2 at NTP. The percentage of nitrogen in the compound is about

A. 20.0

B. 11.8

C. 47.5

D. 23.7

Answer: D

 [Watch Video Solution](#)

4. 0.2 g of organic compound containing carbon, hydrogen and oxygen on combustion yielded 0.147 g CO_2 and 0.12 g water. What will be the content of oxygen in the substance?

A. 73.29%

B. 78.45%

C. 83.23%

D. 89.50%

Answer: A

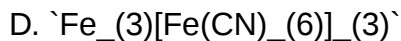
 [Watch Video Solution](#)

5. Sodium fusion extract, obtained from aniline, on treatment with iron (II) sulphate and H_2SO_4 in the presence of air gives a Prussian blue precipitate. The blue colour is due to the formation of

A. $\text{Fe}_4[\text{Fe}(\text{CN})_6]_3$

B. $\text{Fe}_3[\text{Fe}(\text{CN})_6]_2$

C. $\text{Fe}_4[\text{Fe}(\text{CN})_6]_2$



Answer: A

 [Watch Video Solution](#)

6. In the straight-chain hydrocarbon C_8H_{10} , the C atoms beginning from one end have the hybridizations $\text{sp}^3, \text{sp}^2, \text{sp}^2, \text{sp}^3, \text{sp}^2, \text{sp}^2, \text{sp}$, and sp , respectively. The hydrocarbon is

- A. $\text{CH}_3 - \text{C} = \text{C} - \text{CH}_2 - \text{CH} = \text{CH} - \text{CH} = \text{CH}_2$
- B. $\text{CH}_3 - \text{CH}_2 - \text{CH} = \text{CH} - \text{CH}_2 - \text{C} = \text{C} - \text{CH} = \text{CH}_2$
- C. $\text{CH}_3 - \text{CH} = \text{CH} - \text{CH}_2 - \text{C} = \text{C} - \text{CH} = \text{CH}_2$
- D. $\text{CH}_3 - \text{CH} = \text{CH} - \text{CH}_2 - \text{CH} = \text{CH} - \text{C} = \text{CH}$

Answer: D

 [Watch Video Solution](#)

7. In which of the compounds given below is there more than one kind of hybridization ($\text{sp}, \text{sp}_2, \text{sp}_3$) for carbon?

- (i) $\text{CH}_3\text{CH}_2\text{CH}_2\text{CH}_3$
- (ii) $\text{CH}_3 - \text{CH} = \text{CH} - \text{CH}_3$
- (iii) $\text{CH}_2 = \text{CH} - \text{CH} = \text{CH}_2$
- (iv) $\text{H} - \text{C} = \text{C} - \text{H}$

A. (ii) and (iv)

- B. (i) and (iv)
- C. (ii) and (iii)
- D. (ii)

Answer: D

 [View Text Solution](#)

8. The enolic form of butanone contains

- A. 12 sigma bonds, 1 pi bond and 2 lone pairs of electrons
- B. 11 sigma bonds, 1 pi bond and 2 lone pairs of electrons
- C. 12 sigma bonds, 1 pi bond and 1 lone pair of electrons
- D. 10 sigma bonds, 2 pi bonds and 2 lone pairs of electrons

Answer: B

 [Watch Video Solution](#)

9. Which of the following statements regarding the resonance energy of benzene is correct?

- A. Resonance energy is the energy required to break the C - H bond in benzene
- B. Resonance energy is the energy required to break the C - C bond in benzene
- C. Resonance energy is a measure of stability of benzene
- D. Resonance energy is the energy required to convert

Answer: C

 [Watch Video Solution](#)

10. Which of the following is observed in ethylene molecule?

- A. Electromeric effect
- B. Inductive effect
- C. Homolytic fission
- D. None of these

Answer: A

 [View Text Solution](#)

11. Orbital interaction (partial overlapping) between the sigma bonds of a substituent group and a neighbouring pi orbital is known as

- A. Hyperconjugation
- B. Inductive effect
- C. Steric effect
- D. Dipole-dipole interactions

Answer: A

 [Watch Video Solution](#)

12. Carbocation which is most stable is

- A. CH_3CH_2^+
- B. CH_3^+
- C. $\text{C}_6\text{H}_5\text{CH}_2^+$
- D. $\text{CH}_3\text{CH}_2\text{CH}_2^+$

Answer: C

 [View Text Solution](#)

13. No bond resonance explains the stability of the following :

- A. Benzyne
- B. Carbanions
- C. Free radicals
- D. Carbenes

Answer: C

 [Watch Video Solution](#)

14. Which of the following pairs is an example of position isomerism?

- A. $\text{CH}_3\text{-CH}_2\text{-CH}_2\text{-CH}_3$ and $\text{CH}_3\text{-CH}(\text{CH}_3)\text{-CH}_2\text{-CH}_3$

B. $\text{CH}_3\text{-CH}_2\text{-CH=CH}_2$ and $\text{CH}_3\text{-CH=CH-CH}_3$

C. $\text{CH}_3\text{-CH}_2\text{OH}$ and $\text{CH}_3\text{-O-CH}_3$

D. $\text{CH}_3\text{-CH}_2\text{-CH}_2\text{-CH}_2\text{-CH}_3$ and $\text{CH}_3\text{-CH}_2\text{-CH}_2\text{-CH}_2\text{-CH}_3$

Answer: B

 [Watch Video Solution](#)

15. Diethyl ether and methyl n-propyl ether are

A. Position isomers

B. Functional isomers

C. Metamers

D. Chain isomers

Answer: C

 [Watch Video Solution](#)

16. 2-Pentanone and 3-Methyl-2-butanone are a pair of _____ isomers

A. Functional

B. Chain

C. Positional

D. Stereo

Answer: B

 [View Text Solution](#)

17. Sugar is obtained from its saturated solution by

- A. Sublimation
- B. Simple distillation
- C. Crystallisation
- D. Chromatography

Answer: C

 [View Text Solution](#)

18. Two substances when separated out on the basis of their extent of adsorption, by one material, the phenomenon is called:

- A. Chromatography
- B. Paper chromatography
- C. Sublimation
- D. Steam distillation

Answer: A

 [Watch Video Solution](#)

19. Isomers have essentially identical :

- A. Structural formula
- B. Chemical properties
- C. Molecular formula
- D. Physical properties

Answer: C

 [Watch Video Solution](#)

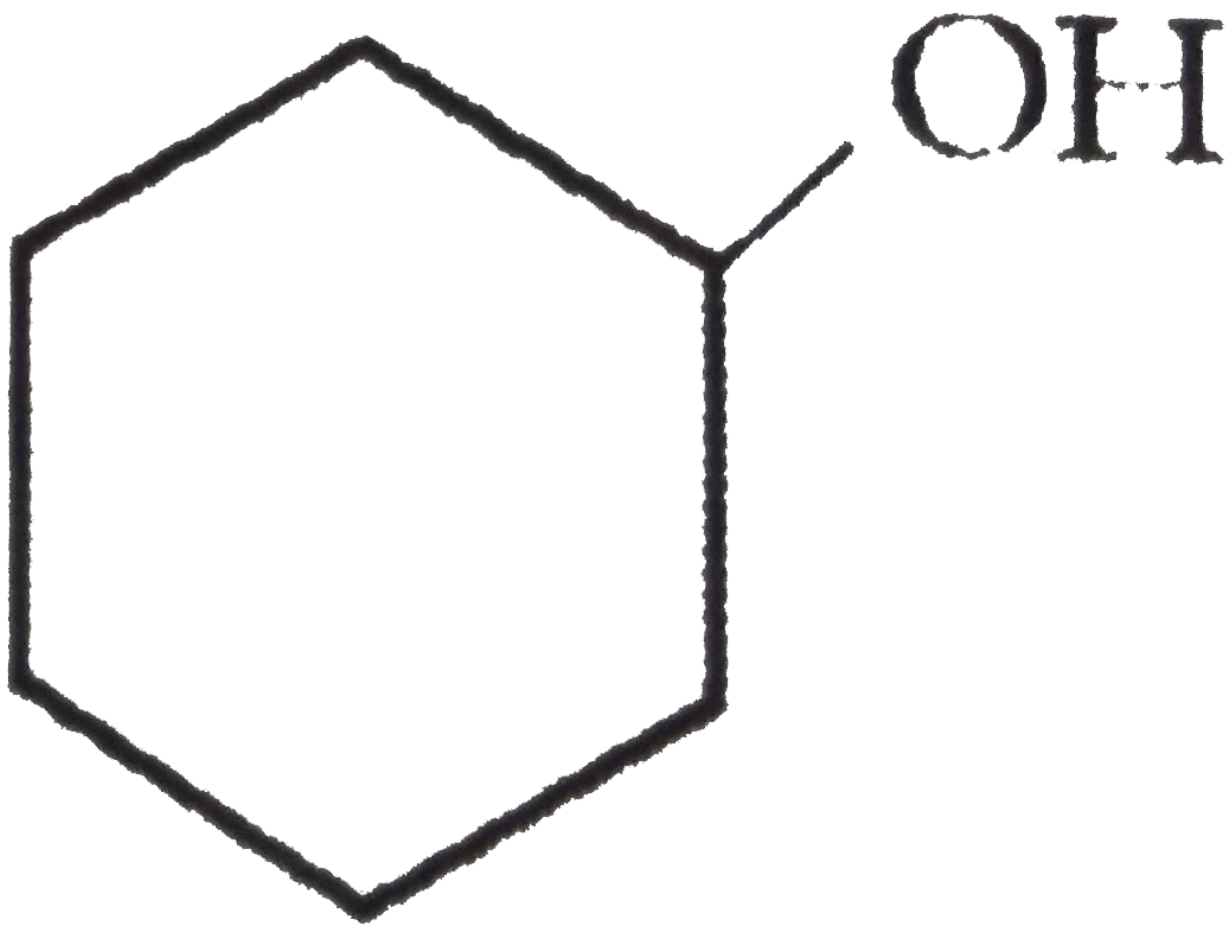
20. IUPAC name of $\text{CH}_2=\text{CH}-\text{CH}(\text{CH}_3)\text{CH}_2\text{C}(\text{Br})\text{CH}_2$ is

- A. 4-Bromo-3-ethyl-1, 4-pentadiene
- B. 2-Bromo-3-ethyl-1, 4-pentadiene
- C. 2-Bromo-3-ethyl-1, 5-pentadiene
- D. None of these

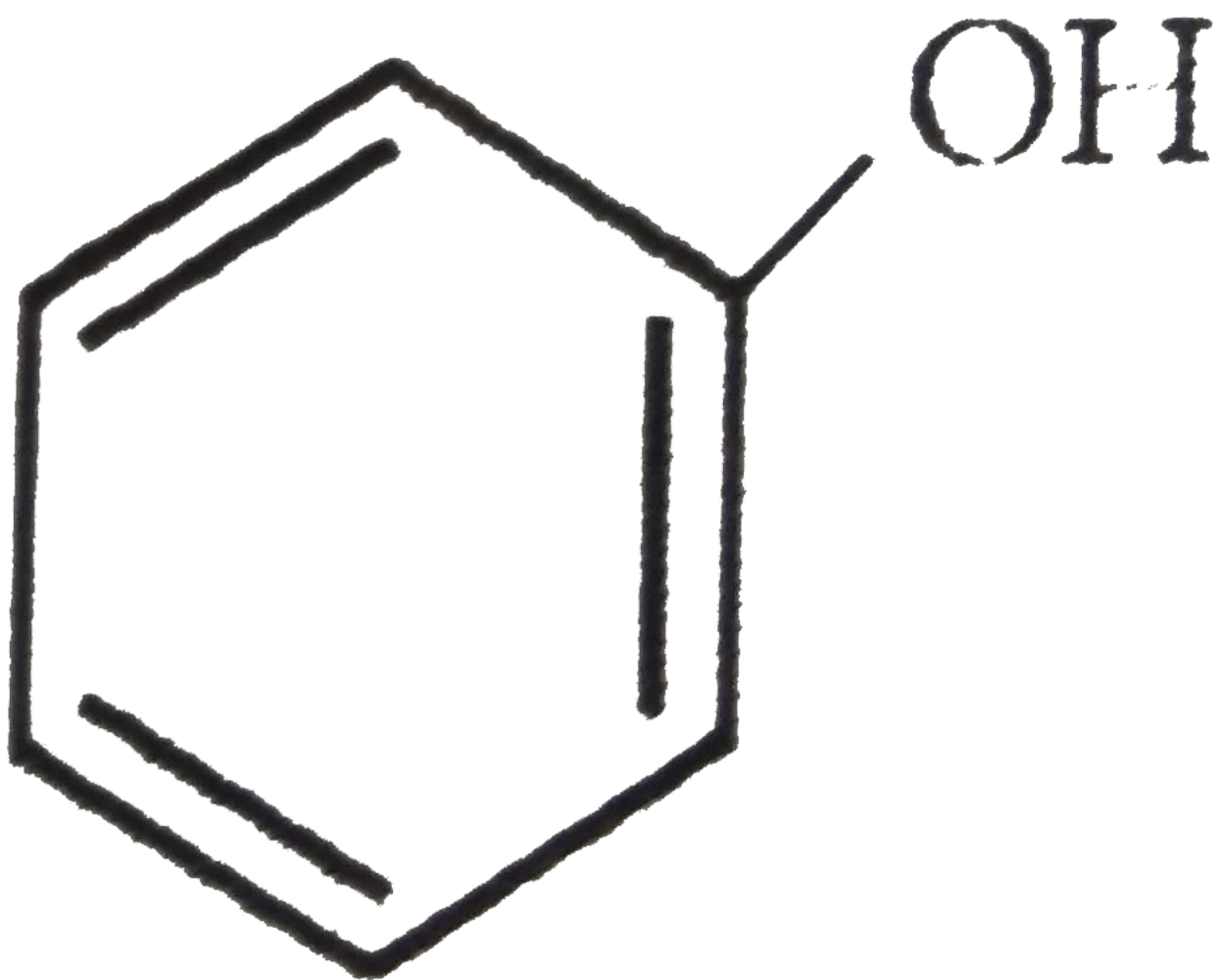
Answer: B

 [Watch Video Solution](#)

21. The structural formula of cyclohexyl alcohol is



A.



B.



C.

D. None of these

Answer: A

 [Watch Video Solution](#)

22. Alicyclic compounds are

- A. Aromatic
- B. Aliphatic
- C. Heterocyclic
- D. Aliphatic cyclic

Answer: C

 [Watch Video Solution](#)

23. The IUPAC name of the compound

$\text{CH}_3\text{-CH(OH)-CH=C-CH}_2\text{-COOH}$ is

- A. Hydroxypentenoic acid
- B. 4-Hydroxy-3-pentenoic acid
- C. 4-Hydroxy-4-pentenoic acid
- D. 4-Hydroxy-4-methyl-3-butenic acid

Answer: B

 [Watch Video Solution](#)

24. Zero inductive effect is shown by

- A. C_6H_5

B. H

C. CH_3

D. Cl

Answer: B

 [View Text Solution](#)

25. Dehydrohalogenation of alkyl halide is

A. Addition reaction

B. Elimination reaction

C. Rearrangement reaction

D. Substitution reaction

Answer: B

 [View Text Solution](#)

26. Carboxylic acids are easily ionised. The main reason of this statement

A. Absence of α hydrogen

B. Resonance stabilisation of carboxylate ion

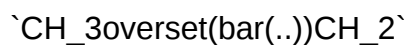
C. Reactivity of α hydrogen

D. Hydrogen bond

Answer: B

 [Watch Video Solution](#)

27. The order of decreasing stability of the carbanions



A. $1 > 2 > 3 > 4$

B. $4 > 3 > 2 > 1$

C. $4 > 1 > 2 > 3$

D. $1 > 2 > 4 > 3$

Answer: B

 [View Text Solution](#)

28. Which of the following statements is correct?

A. "+ I group stabilizes a carbanion"

B. "+ I group stabilizes a carbocation"

C. "- I group stabilizes a carbocation"

D. "- I group destabilizes a carbanion"

Answer: B

 [View Text Solution](#)

29. Which of the following is not a nucleophile ?

A. H_2O

B. CH_3OH

C. H_2

D. NH_3

Answer: C

 [Watch Video Solution](#)

30. Resonance is not exhibited by

A. Phenol

B. Aniline

C. Nitrobenzene

D. Cyclohexane

Answer: D

 [View Text Solution](#)

31. The most unstable carbocation, amongst the following, is

- A. $(\text{CH}_3)_3\text{C}^+$
- B. $(\text{CH}_3)_2\text{CH}^+$
- C. $\text{CH}_3 - \text{CH}_2^+$
- D. CH_3^+

Answer: D

 [View Text Solution](#)

32. Homolytic fission of covalent bond takes place when bonded atoms have

- A. same electronegativity
- B. different electronegativity
- C. same atomic size
- D. different atomic size

Answer: A

 [View Text Solution](#)

33. $\text{CH}_3 - \text{CH}_3 + \text{Cl}_2 \xrightarrow{\text{U.V. Light}} \text{CH}_3 - \text{CH}_2\text{Cl} + \text{HCl}$

Above reaction involves

- A. Formation of Cl - Cl bond

- B. Breaking of Cl - Cl bond
- C. Breaking of C - C bond
- D. Formation of C - Cl bond

Answer: D

 [View Text Solution](#)

34. The effect involving the complete transfer of a shared pair of electrons to one of the atoms joined by a multiple bond at the requirement of attacking reagent is called

- A. δ^+ ve "inductive effect"
- B. mesomeric effect
- C. electromeric effect
- D. δ^- ve "inductive effect"

Answer: C

 [View Text Solution](#)

35. Organic compound are non-conductors of electricity because

- A. are insoluble in water
- B. do not form ions
- C. have low melting point

D. form free radicals

Answer: B

 [Watch Video Solution](#)

36. Which one of the following series contains electrophiles only ?

A. $\text{H}_2\text{O}, \text{SO}_3, \text{NO}_2^+$

B. $\text{NH}_3, \text{H}_2\text{O}, \text{BI}_3$

C. $\text{AlCl}_3, \text{SO}_3, \text{Cl}^+$

D. $\text{ROH}, \text{NH}_3, \text{NO}_2^+$

Answer: C

 [Watch Video Solution](#)

37. $\text{CH}_3\text{-Br} + \text{NH}_3 \rightarrow \text{CH}_3\text{-NH}_2 + \text{HBr}$

The above reaction is classified as

A. Substitution

B. Addition

C. Elimination

D. Rearrangement

Answer: A

 [Watch Video Solution](#)

38. In which of the following reaction modification of carbon skeleton takes place ?

- A. Substitution
- B. Addition
- C. Rearrangement
- D. Elimination

Answer: C

 [View Text Solution](#)

39. Isobutyl alcohol in acidic medium gives tert-butyl alcohol, the reaction is

- A. Addition reaction
- B. Substitution reaction
- C. Elimination reaction
- D. Rearrangement reaction

Answer: C

 [View Text Solution](#)