



# **CHEMISTRY**

**BOOKS - JEEVITH PUBLICATIONS**

**CHEMISTRY (KANNADA ENGLISH)**

**MODEL QUESTION PAPER 3 FOR  
PRACTICE**

**Part A**

1. Aquating animals are more comfortable in cold water rather than in warm water. Give reason.



[Watch Video Solution](#)

2. What is hypertonic solution?



[Watch Video Solution](#)

3. Write the composition of rust?





[Watch Video Solution](#)

4. What happens to the energy of activation of a reaction when positive catalyst is added?



[Watch Video Solution](#)

5. Give an example for protective colloid.



[Watch Video Solution](#)

6. Name the method used to refine semiconducting metals.

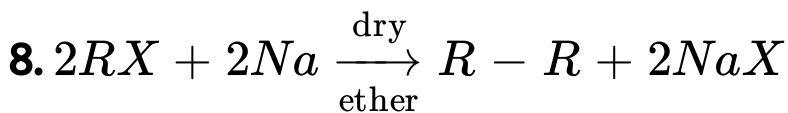


[Watch Video Solution](#)

7. Mention the noble gas element used in cancer therapy.



[Watch Video Solution](#)

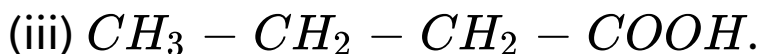
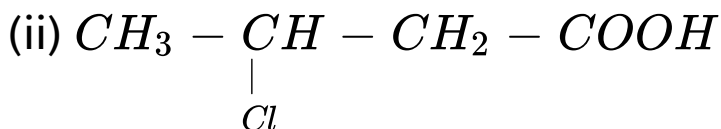
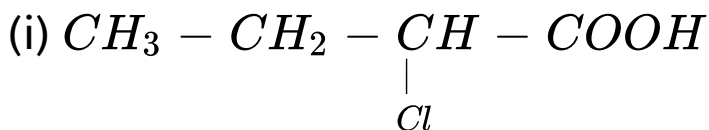


Write the name of the reaction.



Watch Video Solution

9. Arrange the following in the increasing order of their acidity.



Watch Video Solution

10. Write the Zwitter ion structure of Glycine.



[Watch Video Solution](#)

## Part B

1. In terms of band theory, what is the difference between a conductor and an insulator?



[Watch Video Solution](#)

2. Find the mass of copper deposited on cathode when a current of 1.5A is passed through copper sulphate solution for 5 minutes (At. Mass of Cu=63.5).



[Watch Video Solution](#)

3. Write any two differences between order and molecularity of a reaction?



[Watch Video Solution](#)

4. Write the balanced equation for the reaction between acidified  $KMnO_4$  and oxalic acid. What is the importance of this reaction?



[Watch Video Solution](#)

5. Why is phenol more acidic than cresol?



[Watch Video Solution](#)



6. How is benzaldehyde prepared by Etard's reaction?



[Watch Video Solution](#)

7. Explain Hofmann's bromamide reaction with an example.



[Watch Video Solution](#)

8. What is an antibiotic? Give an example.



[Watch Video Solution](#)

## Part C

1. Name any two ores of zinc. How is zinc extracted from zinc oxide?



[Watch Video Solution](#)

2. What happens when ammonium dichromate crystals are heated?



[Watch Video Solution](#)

3. How do you convert  $N_2$  to nitric oxide?



[Watch Video Solution](#)

4. Mention any one use of nitrogen.



[Watch Video Solution](#)

5. Mention any two anomalous properties of nitrogen.



[Watch Video Solution](#)

6. Write the structure of orthophosphoric acid?



[Watch Video Solution](#)

7. How is chlorine gas prepared in laboratory.



[Watch Video Solution](#)

**8.** Give reason "All halogens are coloured".



[Watch Video Solution](#)

**9.** Give reason:

Transition elements exhibit variable oxidation states.



[Watch Video Solution](#)

**10.** Give reason:

$Ti^{+4}$  ion is colourless.



**Watch Video Solution**

**11.** Give reason:

$Cu^{+1}$  ion is diamagnetic.



**Watch Video Solution**

**12.** Explain the preparation of  $KMnO_4$  from pyrolusite.



**Watch Video Solution**

**13.** Write the general electronic configuration of 3d series of transition elements.



**Watch Video Solution**

14. Using VBT, explain the geometry and magnetic property of  $[CO(NH_3)_6]^{+3}$ .



[Watch Video Solution](#)

15. Mention any one importance of coordination compounds in the field of

(i) Biology

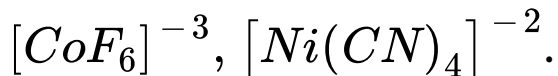
(ii) Metallurgy.



[Watch Video Solution](#)



16. identify the low spin complex in the following:



Watch Video Solution

## Part D

1. Calculate the number of atoms per unit cell of BCC.



Watch Video Solution

2. Point out the differences between tetrahedral voids and octahedral voids.



**Watch Video Solution**

3. What type of semiconductor is formed when 13th group element is doped with silicon?



**Watch Video Solution**

4. 15 g of an unknown molecular substance was dissolved in 450 g of water. The resulting solution freezes at  $-0.34^{\circ}\text{C}$ . what is molar mass of the substance ?

$$\left( K_f \text{ for water} = 1.86 \text{ kg mol}^{-1} \right)$$



[Watch Video Solution](#)

5. What are azeotypes? Give an example.



[Watch Video Solution](#)

6. The resistance of solution of salt occupying a volume of between two platinum electrodes 1.8 cm apart and  $5.4 \text{ cm}^2$  in area was found to be 32 ohms. Calculate the conductivity of the solution.



[Watch Video Solution](#)

7. Write the symbolic representation of standard hydrogen electrode and give its standard potential value.



[Watch Video Solution](#)

8. Derive an integrated rate equation for the rate constant of a first-order reaction.



[Watch Video Solution](#)

9. Draw the graph for  $[R]$  versus time ( $t$ ) for a zero order reaction. Give the relationship between the rate constant and the slope of the curve.



[Watch Video Solution](#)

**10.** Give any differences between physical adsorption and chemical adsorption.



**Watch Video Solution**

**11.** What is

(i) Tyndall Effect.

(ii) Peptisation.



**Watch Video Solution**

1. How does bromo ethane react with

(i) alcoholic KCN

(ii) alcoholic AgCN



[Watch Video Solution](#)

2. Give an example for Wurtz-Fitting reaction.



[Watch Video Solution](#)

3. How do you distinguish between primary, secondary and tertiary alcohols using Lucas reagent.



[Watch Video Solution](#)

4. What happens when benzene diazonium chloride is warmed with water?



[Watch Video Solution](#)



5. How does benzaldehyde react with

(i)  $NH_2OH$

(ii) Nitrating mixture.



**Watch Video Solution**

6. Write the structure of

(i) 3 hydroxybutanol

(ii) 4-chloro acetophenone.



**Watch Video Solution**

7. i) Explain Hoffmann bromamide degradation for the preparation of aniline.

ii) Give the IUPAC name of  $CH_3 - NH - CH_2 - CH_3$ .



[Watch Video Solution](#)

8. b) What is Hinsberg's reagent? Between  $CH_3NH_2$  and  $C_6H_5NH_2$  which is more basic?



[Watch Video Solution](#)

9. What are reducing Zwitter ion form of an  $\alpha$ -amino acid.



Watch Video Solution

10. (i) Write the Zwitter ion form of an  $\alpha$ -amino acid.

(ii) Name the naturally occurring  $\alpha$ -amino acids that is not optically active.



Watch Video Solution

**11.** What is copolymerization? Give an example with equation.



**Watch Video Solution**

**12.** Give an example for

(i) Polymer fibre.

(ii) thermosetting polymer.



**Watch Video Solution**