



# MATHS


## BOOKS - MCGROW HILL EDUCATION MATHS (HINGLISH)

### FOLDING PAPER CUTTING


#### Example

1. Consider the following three figure X, Y and Z . There is one fold in X, another in Y and the


way the paper is cut is shown in Z. From amongst the answer figs. (a), (b) ,(c) and (d) , select the one showing the unfolded position of Z.




A.




B.



C.



D.



**Answer: D**



**Watch Video Solution**

**Exercise**

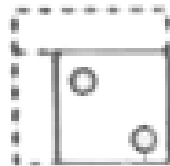
1. The questions that follow contain a set of three figures X, Y and Z showing a sequence of folding of a piece of paper. Figure (Z) shows the manner in which the folded paper has been cut . These three figures are followed by four answer figures from which you have to choose a figure which would most closely resemble the unfolded form of fig. (Z)



**X**




**Y**




**Z**


A.




B.



C.



D.



**Answer: A**




**Watch Video Solution**

2. The questions that follow contain a set of three figures X, Y and Z showing a sequence of folding of a piece of paper. Figure (Z) shows the manner in which the folded paper has been cut . These three figures are followed by four answer figures from which you have to choose a figure which would most closely resemble the unfolded form of fig. (Z)



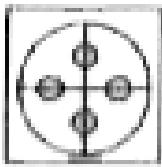
X




Y



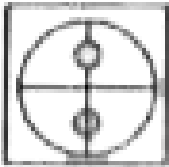
Z



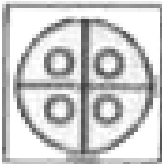
A.



B.



C.



D.

**Answer: D**



**Watch Video Solution**

3. The questions that follow contain a set of three figures X, Y and Z showing a sequence of folding of a piece of paper. Figure (Z) shows the manner in which the folded paper has been cut . These three figures are followed by four answer figures from which you have to choose a figure which would most closely resemble the unfolded form of fig. (Z)



X



Y



Z





A.



B.



C.



D.

**Answer: D**



**Watch Video Solution**

4. The questions that follow contain a set of three figures X, Y and Z showing a sequence of folding of a piece of paper. Figure (Z) shows the manner in which the folded paper has been cut . These three figures are followed by four answer figures from which you have to choose a figure which would most closely resemble the unfolded form of fig. (Z)



X

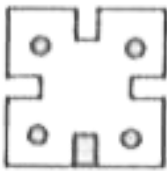


Y

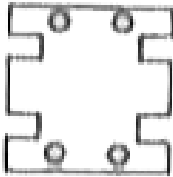


Z

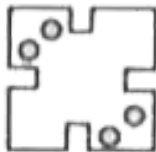
A.



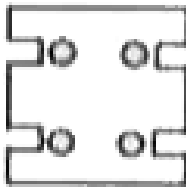
B.



C.



D.

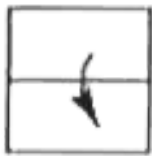


**Answer: C**

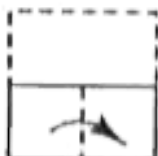


**Watch Video Solution**

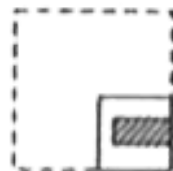
5. The questions that follow contain a set of three figures X, Y and Z showing a sequence of folding of a piece of paper. Figure (Z) shows the manner in which the folded paper has been cut . These three figures are followed by four answer figures from which you have to choose a figure which would most closely resemble the unfolded form of fig. (Z)



X



Y

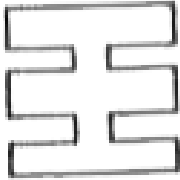


Z


A.




B.



C.



D.



**Answer: B**



**Watch Video Solution**

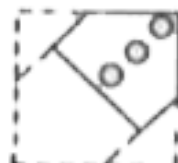
6. The questions that follow contain a set of three figures X, Y and Z showing a sequence of folding of a piece of paper. Figure (Z) shows the manner in which the folded paper has been cut . These three figures are followed by four answer figures from which you have to choose a figure which would most closely resemble the unfolded form of fig. (Z)



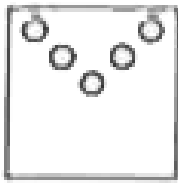
X




Y



Z



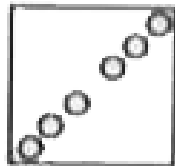
A.



B.



C.



D.

**Answer: D**



**Watch Video Solution**

7. The questions that follow contain a set of three figures X, Y and Z showing a sequence of folding of a piece of paper. Figure (Z) shows the manner in which the folded paper has been cut . These three figures are followed by four answer figures from which you have to choose a figure which would most closely resemble the unfolded form of fig. (Z)



X



Y




Z



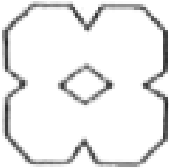
A.




B.



C.



D.



**Answer: C**



**Watch Video Solution**

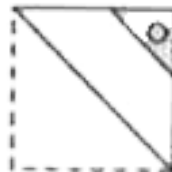
8. The questions that follow contain a set of three figures X, Y and Z showing a sequence of folding of a piece of paper. Figure (Z) shows the manner in which the folded paper has been cut . These three figures are followed by four answer figures from which you have to choose a figure which would most closely resemble the unfolded form of fig. (Z)



X



Y

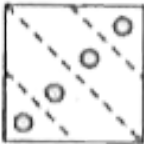


Z

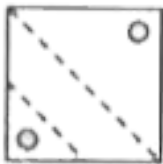
A.



B.



C.



D.



**Answer: A**

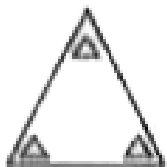


**Watch Video Solution**

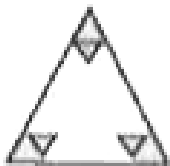
9. The questions that follow contain a set of three figures X, Y and Z showing a sequence of folding of a piece of paper. Figure (Z) shows the manner in which the folded paper has been cut . These three figures are followed by four answer figures from which you have to choose a figure which would most closely resemble the unfolded form of fig. (Z)



A.



B.



C.



D.



**Answer: C**



**Watch Video Solution**

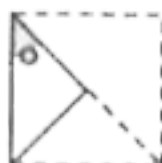
**10.** The questions that follow contain a set of three figures X, Y and Z showing a sequence of folding of a piece of paper. Figure (Z) shows the manner in which the folded paper has been cut . These three figures are followed by four answer figures from which you have to choose a figure which would most closely resemble the unfolded form of fig. (Z)



X




Y




Z

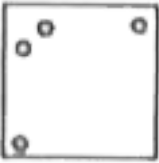
A.




B.



C.



D.



**Answer: A**

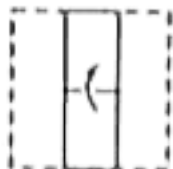


**Watch Video Solution**

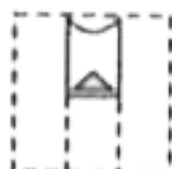
11. The questions that follow contain a set of three figures X, Y and Z showing a sequence of folding of a piece of paper. Figure (Z) shows the manner in which the folded paper has been cut . These three figures are followed by four answer figures from which you have to choose a figure which would most closely resemble the unfolded form of fig. (Z)



X



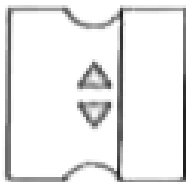
Y



Z



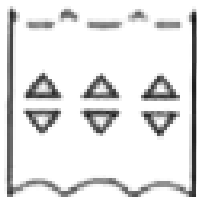
A.



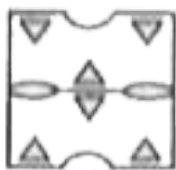
B.



C.



D.



**Answer: C**



**Watch Video Solution**

12. The questions that follow contain a set of three figures X, Y and Z showing a sequence of folding of a piece of paper. Figure (Z) shows the manner in which the folded paper has been cut . These three figures are followed by four answer figures from which you have to choose a figure which would most closely resemble the unfolded form of fig. (Z)



X

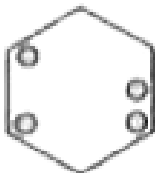


Y

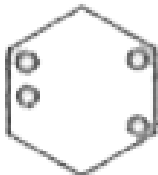


Z

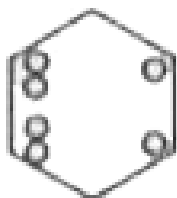
A.



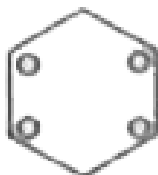
B.



C.



D.



**Answer: C**



**Watch Video Solution**

**13.** The questions that follow contain a set of three figures X, Y and Z showing a sequence of folding of a piece of paper. Figure (Z) shows the manner in which the folded paper has been cut . These three figures are followed by four answer figures from which you have to choose a figure which would most closely resemble the unfolded form of fig. (Z)



X

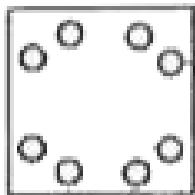


Y

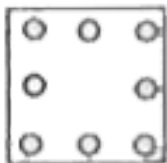


Z

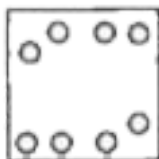
A.




B.



C.



D.



**Answer: A**

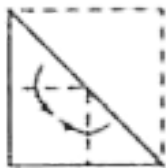


**Watch Video Solution**

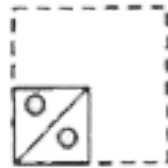
**14.** The questions that follow contain a set of three figures X, Y and Z showing a sequence of folding of a piece of paper. Figure (Z) shows the manner in which the folded paper has been cut . These three figures are followed by four answer figures from which you have to choose a figure which would most closely resemble the unfolded form of fig. (Z)



X




Y




Z

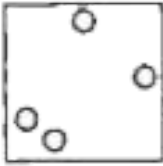
A.




B.



C.



D.

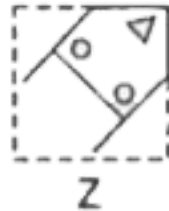
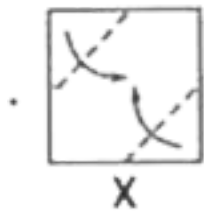


**Answer: D**



**Watch Video Solution**

15. The questions that follow contain a set of three figures X, Y and Z showing a sequence of folding of a piece of paper. Figure (Z) shows the manner in which the folded paper has been cut . These three figures are followed by four answer figures from which you have to choose a figure which would most closely resemble the unfolded form of fig. (Z)

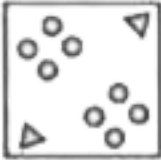





A.




B.



C.



D.



**Answer: B**



**Watch Video Solution**

