



PHYSICS

BOOKS - SURA PUBLICATION

Light

Exercise

1. The centre of a sphere of which the reflecting surface of a spherical mirror is a part is called

A. centre of curvature

B. pole

C. radius of curvature

D. aperture

Answer:



Watch Video Solution

2. The spherical mirror used as a rear view mirror in the vehicle is

A. conver mirror

B. concave mirror

C. plane mirror

D. radius curvature

Answer:



Watch Video Solution

3. The imaginary line passing through the center of curvature and pole of a spherical mirror is called

A. centre of curvature

B. pole

C. principal axis

D. radius curvature

Answer:



Watch Video Solution

4. The distance from the plot to the focus is called

- A. pole length
- B. focal length
- C. principal axis
- D. None of above

Answer:



Watch Video Solution

5. Focal length is equal to half of the

- A. centre of curvature

B. axis

C. radius of curvature

D. None of above

Answer:



Watch Video Solution

6. If the focal length of a spherical mirror is 10cm , what is the value of its radius of curvature?

A. 10cm

B. 5cm

C. 20cm

D. 15cm

Answer:



Watch Video Solution

7. If the image and object distance is same,
then the object is place at

A. infinity

B. at F

C. between f and p

D. at C

Answer:



Watch Video Solution

8. The refractive index of water is

A. 1.0

B. 1.33

C. 1.44

D. 1.52

Answer:



Watch Video Solution

9. The spherical mirror used in a beauty parlour as a make-up mirror is _____.



Watch Video Solution

10. Geometric center of the spherical mirror is

_____.



[Watch Video Solution](#)

11. Name of the images formed by a convex

mirror is _____.



[Watch Video Solution](#)

12. The mirror used by the ophthalmologist to examine the eye is _____.



[Watch Video Solution](#)

13. If the angle of incidence is 45° , then the angle of reflection is _____.



[Watch Video Solution](#)

14. Two mirror are parallel to each other, then the number of images formed is _____.



[Watch Video Solution](#)

15. Match the following

1.	Convex mirror	(a)	Radio telescopes
2.	Parabolic mirror	(b)	wall
3.	Regular reflection	(c)	rear – view mirror
4.	Irregular reflection	(d)	Plane mirror



[Watch Video Solution](#)

16. Match the following

1.	Convex mirror	(a)	Radio telescopes
2.	Parabolic mirror	(b)	wall
3.	Regular reflection	(c)	rear – view mirror
4.	Irregular reflection	(d)	Plane mirror



Watch Video Solution

17. If the focal length of a spherical mirror is 12cm , what is the value of its radius of curvature?

A. 10cm

B. 5cm

C. 6cm

D. 24cm

Answer:



Watch Video Solution

18. Which object use the reflection of light?

A. Kaleidoscope

B. plane mirror

C. Convex mirror

D. All of these

Answer:



Watch Video Solution

19. Which surface will not demonstrates the law of reflection?

A. Rough surfasce

B. Smooth surface

C. Shining surface

D. Opaque surface

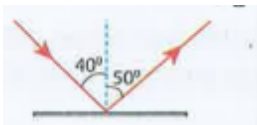
Answer:



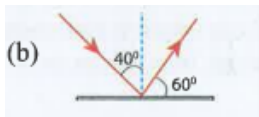
Watch Video Solution

20. Which of the following demonstrates the law of reflection?

A.



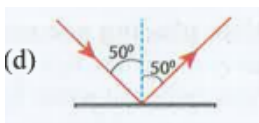
B.



C.



D.



Answer:



Watch Video Solution

21. The ENT doctor uses a _____.

- A. plane mirrors
- B. concave mirror
- C. convex mirror
- D. convex lens

Answer:



Watch Video Solution

22. In dispersion, the colour of light that will bend more is _____.

A. red

B. yellow

C. green

D. violet

Answer:



Watch Video Solution

23. Reflection by a looking mirror is called _____.

- A. regular reflection
- B. irregular reflection
- C. regular and irregular reflection
- D. none of these

Answer:



Watch Video Solution

24. The velocity of light in vacuum is $3 \times 10^8 \text{ms}^{-1}$ and in glass is $2 \times 10^8 \text{ms}^{-1}$ reflective index of glass is _____.

- A. 2
- B. 1.5
- C. 1.8
- D. 1.33

Answer:



Watch Video Solution

25. Incident angle of a ray of light is 30° . The angle between the incident ray and the reflected ray is _____.

A. 50°

B. 90°

C. 60°

D. 15°

Answer:



Watch Video Solution

26. In the head light of motor vehicles,_____ mirrors are used as reflectors.

A. plane mirrors

B. concave lenses

C. Convex mirrors

D. concave mirrors

Answer:



Watch Video Solution

27. The phenomenon of light passing through the object is called _____.

A. reflection

B. refraction

C. dispersion

D. total internal reflection

Answer:



Watch Video Solution

28. The bouncing back of light from a surface is called _____.



Watch Video Solution

29. _____ mirrors make things look larger when object are placed close to it.



Watch Video Solution

30. Convex mirror always forms _____ and _____ image.



Watch Video Solution

31. The incident ray, _____ ray and the _____ at the point of incidence. all on the same plane.



Watch Video Solution

32. A ray of light incident along normal to the mirror to the mirror ____ its path.



Watch Video Solution

33. When light passes from one medium to another the ray gets bent. This property light is called ____.



Watch Video Solution

34. Spherical mirrors are one from of _____
mirrors.



Watch Video Solution

35. _____ mirrors magnify the object placed
close to them.



Watch Video Solution

36. The image formed by convex mirrors is _____ then the object



Watch Video Solution

37. _____ mirrors form the perfect image of an object.



Watch Video Solution

38. The _____ of a mirror determines the type of image it forms.



Watch Video Solution

39. The _____ is an optical device with a polished surface that reflects the light falling on it.



Watch Video Solution

40. Match the following

i	Real image	(a)	Distance between pole and centre of curvature.
ii	Virtual image	(b)	Centre of the sphere of which the mirror is a part.
iii	Focus	(c)	Line passing through the pole and focus.
iv	Principal axis	(d)	Erect
v	Centre of curvature	(e)	Inverted



[Watch Video Solution](#)

41. Match the following

i	The ray that enters the transparent medium	(a)	Violet
ii	The ray that comes out from a transparent medium into air	(b)	0°
iii	Speed of light in vacuum	(c)	Emergent ray
iv	The angle of incidence for normal incidence	(d)	Incident ray
v	The colour that deviates the most	(e)	3×10^8 m/s



[Watch Video Solution](#)

42. Match the following

i	Mirror	(a)	Used by dentists to see enlarged image of teeth.
ii	Virtual image	(b)	Can be taken on a screen.
iii	Real image	(c)	Cannot be taken on a screen.
iv	Convex mirror	(d)	An optical device which produces reflection.
v	Concave mirror	(e)	Can form image of objects spread over a larger area



[Watch Video Solution](#)

43. Cross word puzzle : Across ,Mirror which converges a parallel beam of light passing through it.



[Watch Video Solution](#)

44. The imaginary line passing through the center of curvature and pole of a spherical mirror is called



Watch Video Solution

45. Geometric center of the spherical mirror is
----- .



Watch Video Solution

46. Cross word puzzle : Across , Mirror which diverges a parallel beam of light passing through it.



Watch Video Solution

47. Cross word puzzle : Across ,The formation of rainbow is an example of .



Watch Video Solution

48. Cross word puzzle : Across , Centre of the sphere from which the mirror is made.



Watch Video Solution

49. The _____ is an optical device with a polished surface that reflects the light falling on it.



Watch Video Solution

50. Cross word puzzle : Across ,Image which can be formed on a screen.



Watch Video Solution

51. Cross word puzzle : Across ,Image which cannot be formed on a screen.



Watch Video Solution

52. Cross word puzzle : Across ,The bending of a light ray when it passes from one medium to another medium of different density.



Watch Video Solution

53. The refractive index of water is

A. 1.0

B. 1.33

C. 1.44

D. 1.52

Answer:



Watch Video Solution

54. In the hand lights of motor vehicles, _____ mirrors are used as reflectors.

A. plane mirrors

B. concave lenses

C. colourless light

D. black light

Answer:



Watch Video Solution

55. If we mix lights of the colours of rainbow, we will get_____.

A. pink light

B. brown light

C. colourless light

D. black light

Answer:



Watch Video Solution

56. Geometric center of the spherical mirror is

_____ .



Watch Video Solution

57. _____ mirrors magnify the object placed close to them.



[Watch Video Solution](#)

58. _____ is a form of energy and it travels in straight line.



[Watch Video Solution](#)

59. Match the following

Convex mirror	(a)	Radio telescopes
Parabolic mirror	(b)	wall
Regular reflection	(c)	rear – view mirror
Irregular reflection	(d)	Plane mirror



[Watch Video Solution](#)

60. Light is a form of energy and it travels in a straight line.



[Watch Video Solution](#)

61. Geometric center of the spherical mirror is

_____ .



Watch Video Solution

62. Refractive index is a ratio of two similar quantities and so, it has no unit.



Watch Video Solution

63. Reflection from a rough surface is called diffused reflection.



Watch Video Solution

64. Define focal length



Watch Video Solution

65. Light travels fastest in vacuum. Why?



Watch Video Solution

66. If two plane mirrors are inclined to each other at an angle of 45° , find the number of images formed.



Watch Video Solution

67. State the Snell's law of refraction.



Watch Video Solution

68. Why do we need a shiny surface for reflection?



Watch Video Solution

69. What is dispersion? Explain in detail.



Watch Video Solution

70. Explain the uses of periscope.



Watch Video Solution

Example

1. What is called a spherical mirror?



[Watch Video Solution](#)

2. Define focal length



[Watch Video Solution](#)

3. The radius of curvature of a spherical mirror is 25cm . Find its focal length.



[Watch Video Solution](#)

4. Give two applications of a concave and convex mirror.



[Watch Video Solution](#)

5. State the laws of reflection.



[Watch Video Solution](#)

6. If two plane mirrors are inclined to each other at an angle of 45° , find the number of images formed.



[Watch Video Solution](#)

7. Define refractive index of a medium.



[Watch Video Solution](#)

8. State the Snell's law of refraction.



Watch Video Solution

9. Explain the images formed by a concave mirror for different position of the object.



Watch Video Solution

10. What is reflection? Write short notes on regular and irregular reflection?





[Watch Video Solution](#)

11. Explain the working of a periscope.



[Watch Video Solution](#)

12. What is dispersion? Explain in detail.



[Watch Video Solution](#)

13. Speed of light in air is $3 \times 10^8 \text{ms}^{-1}$ and the refractive index of a medium is 1.5. Find the speed of light of in the medium.



[Watch Video Solution](#)

14. Speed of light in air is $3 \times 10^8 \text{ms}^{-1}$ and light in the medium is $3 \times 10^8 \text{ms}^{-1}$. Find the refractive index of the medium with respect to air.



[Watch Video Solution](#)

15. We can see things around us only when the light reflected by them reaches our eyes.



Watch Video Solution

16. Light is a form of energy and it travels in a straight line.



Watch Video Solution

17. The periscope is an optical device with a polished surface that reflects the light falling on it.



Watch Video Solution

18. Curved mirrors have surface that are spherical, cylindrical, parabolic and ellipsoid.



Watch Video Solution

19. Curved mirrors form the perfect image of an object.



Watch Video Solution

20. Curved mirrors produce images that are either enlarged or diminished.



Watch Video Solution

21. A thin layer of molten aluminium or silver is used for coating plates that will then become mirrors.



Watch Video Solution

22. The most common example of a convex mirror is the make-up mirror.



Watch Video Solution

23. Assertion and Reason. Mark the correct choice as:
Assertion: A ray incident along normal to the mirror retraces its path
Reason: In reflection, angle of incidence is always equal to angle of reflection.

A. If both assertion and reason are true and the reason is the correct explanation of the assertion.

B. If both assertion and reason are true, but the reason is not the correct

explanation of the assertion.

C. If the assertion is true, but the reason is false.

D. If the assertion is false, but the reason is true.

Answer:



Watch Video Solution

24. Assertion and Reason. Mark the correct choice as:
Assertion: Convex mirror are used as rear view mirror in vehicles for observing traffic at our back.
Reason: A convex mirror has a much larger field of view.

A. If both assertion and reason are true and the true and the reason is the correct explanation of the assertion.

B. If both assertion and reason are true, but the reason is not the correct

explanation of the assertion.

C. If the assertion is true, but the reason is false.

D. If the assertion is false, but the reason is true.

Answer:



Watch Video Solution

25. Assertion and Reason. Mark the correct choice as:
Assertion: The mirror used in search lights are parabolic and not concave spherical.
Reason: In concave spherical mirror the image the image formed is always virtual.

A. If both assertion and reason are true and the reason is the correct explanation of the assertion.

B. If both assertion and reason are true, but the reason is not the correct

explanation of the assertion.

C. If the assertion is true, but the reason is false.

D. If the assertion is false, but the reason is true.

Answer:



Watch Video Solution

26. Assertion and Reason. Mark the correct choice as:
Assertion: We can see the rainbow in the sky when the rain starts falling after a spell of bright sunlight. Reason: The rainbow is formed due to dispersion of light.

A. If both assertion and reason are true and the reason is the correct explanation of the assertion.

B. If both assertion and reason are true, but the reason is not the correct

explanation of the assertion.

C. If the assertion is true, but the reason is false.

D. If the assertion is false, but the reason is true.

Answer:



Watch Video Solution

27. How does the light travel?





Watch Video Solution

28. What is reflection of light?



Watch Video Solution

29. What is mirror



Watch Video Solution

30. What type of image is formed by a concave mirror?



Watch Video Solution

31. What is rainbow?



Watch Video Solution

32. Name the triangular piece of glass that splits white light into different colours.



[Watch Video Solution](#)

33. What is the composition of sunlight?



[Watch Video Solution](#)

34. When a ray of light travels from one medium to another, it bends. This phenomenon is called _____.



[Watch Video Solution](#)

35. Name the two types of spherical mirrors.



Watch Video Solution

36. The angle between incident ray and reflected ray is 60° . What is the value of angle of incidence?



Watch Video Solution

37. Light travels fastest in vacuum. Why?





[Watch Video Solution](#)

38. Write the difference between real and virtual image.



[Watch Video Solution](#)

39. Write the uses of concave lens.



[Watch Video Solution](#)

40. A convex rear view mirrors is preferred over a plane mirror in a car. Why?



Watch Video Solution

41. What type of image is formed by a concave mirror?



Watch Video Solution

42. Why do we need a shiny surface for reflection?



Watch Video Solution

43. The radius of curvature of a spherical mirror is 18cm What is the focal length of this mirror?



Watch Video Solution

44. What happens to light when it gets dispersed? Give an example.



Watch Video Solution

45. If two mirrors are placed at an inclination of 30° then how many images can be seen?



Watch Video Solution

46. What is the speed of light in diamond if its refractive index is 2.41?



Watch Video Solution

47. A light ray moves from glass ($V_{glass} = 2.0 \times 10^8 \text{ m s}^{-1}$) to diamond ($V_{\diamond} = 1.25 \times 10^8 \text{ m s}^{-1}$). What is the refractive index of diamond with respect to glass?



Watch Video Solution

48. Find the refractive index of water with respect to glass if the refractive index of water is $\frac{4}{3}$ and the refractive index of glass is $\frac{3}{2}$.



Watch Video Solution

49. The speed of light in air is $3 \times 10^8 \text{ms}^{-1}$ and that in water is $2.25 \times 10^8 \text{ms}^{-1}$. Find the absolute refractive index of water.



Watch Video Solution

50. Differentiate between regular and irregular reflection.



Watch Video Solution

51. Explain the construction and working of kaleidoscope.



Watch Video Solution

52. Explain the construction and working of periscope with a labelled diagram.



Watch Video Solution

53. Explain the uses of periscope.



Watch Video Solution

54. Explain the images formed by a concave mirror for different position of the object.



[Watch Video Solution](#)

55. Explain some phenomene which occur due to refraction of light in our daily life.



[Watch Video Solution](#)

56. Draw the following: Concave mirror



[Watch Video Solution](#)

57. Draw the following: Convex mirror



Watch Video Solution

58. Draw the ray diagram and write the characteristics of the images formed when an object is placed. At infinity in front of a concave mirror.



Watch Video Solution

59. Draw the ray diagram and write the characteristics of the images formed when an object is placed. At infinity in front of a convex mirror.



Watch Video Solution

60. Draw a neat labelled diagram of a periscope.



Watch Video Solution

61. Draw a ray diagram to show a light ray travels from denser medium (glass) to raree mediym (air)



Watch Video Solution

62. Drow a ray diagram to show a light ray travels from rater medium (air) to denser medium (water)



Watch Video Solution

63. Imagine that parallel rays are incident on an irregular surface. Are the rays reflected from this surface parallel to each other?



Watch Video Solution

64. A safety vest helps to keep the workers who are working by the roadside safe. This especially so during the nights. Why?



Watch Video Solution

65. What is the difference between virtual images of an object formed by a concave mirror and a convex mirror?



Watch Video Solution

66. What is a virtual image? Give one situation where a virtual image is formed.



Watch Video Solution

67. If all object around us were to reflect light in a regular way, what problem might we face?



Watch Video Solution

68. Car rear view mitrrors carry a warning message that " objects in the rear view mirror are closer than they appear". Why do you think this is so?



Watch Video Solution