



# MATHS

**BOOKS - MCGROW HILL EDUCATION**

**MATHS (HINGLISH)**

**WATER-IMAGES**


## Exercise 1

1. In each of the following questions , you are given a combination of letters or/and numbers

followed by four alternatives (a),(b) ,(c) ,(d) .

Choose the alternative which most closely resembles the water image of the given combination .

FRUIT

A. 

B. 

C. 

D. 

**Answer: B**



Watch Video Solution

2. In each of the following questions , you are given a combination of letters or/and numbers followed by four alternatives (a),(b) ,(c) ,(d) . Choose the alternative which most closely resembles the water image of the given combination .

DISC

A. **CSID**

B. DISC

C. DISC

D. DISC

**Answer: C**



**Watch Video Solution**


**3.** In each of the following questions , you are given a combination of letters or/and numbers

followed by four alternatives (a),(b) ,(c) ,(d) .


Choose the alternative which most closely resembles the water image of the given combination .

A1M3B

A.   
A.

B.   
B.

C.   
C.

D.   
D.

**Answer: C**



[View Text Solution](#)

4. In each of the following questions , you are given a combination of letters or/and numbers followed by four alternatives (a),(b) ,(c) ,(d) . Choose the alternative which most closely resembles the water image of the given combination .

TRAY

A.

B. YART

C. TRAY

D. YART

**Answer: A**



**Watch Video Solution**

5. In each of the following questions , you are given a combination of letters or/and numbers followed by four alternatives (a),(b) ,(c) ,(d) .

Choose the alternative which most closely resembles the water image of the given combination .

FAMILY

A. YTIMAF

B. EVMILY

C. YLIMAE

D. EVMILY

**Answer: D**



**Watch Video Solution**



6. In each of the following questions , you are given a combination of letters or/and numbers followed by four alternatives (a),(b) ,(c) ,(d) . Choose the alternative which most closely resembles the water image of the given combination .

NUCLEAR

A. BVETCSUI

B. IJCTEAVK

C. И П С Г Е А В К

D. И П С Г Е А В К

**Answer: D**



**Watch Video Solution**

7. In each of the following questions , you are given a combination of letters or/and numbers followed by four alternatives (a),(b) ,(c) ,(d) . Choose the alternative which most closely resembles the water image of the given

combination .

QUARREL

A. QUVKREI

B. QUVKREI

C. QUVKREI

D. QURKREI

**Answer: C**



**Watch Video Solution**

8. In each of the following questions , you are given a combination of letters or/and numbers followed by four alternatives (a),(b) ,(c) ,(d) . Choose the alternative which most closely resembles the water image of the given combination .

U4P15B7

A. U4P15B7

B. U4P15B7

C. U4P15B7

D. 04612B1

**Answer: D**



**View Text Solution**

**9.** In each of the following questions , you are given a combination of letters or/and numbers followed by four alternatives (a),(b) ,(c) ,(d) . Choose the alternative which most closely resembles the water image of the given

combination .

PQ8AF5BZ9

A. Ɔ08VƆ2BZθ

B. Ɔ08VƆ2BΣ6

C. Ɔ08VƆ5BΣ9

D. Ɔ08VƆ2BΣθ

**Answer: D**



**View Text Solution**

**10.** In each of the following questions , you are given a combination of letters or/and numbers followed by four alternatives (a),(b) ,(c) ,(d) . Choose the alternative which most closely resembles the water image of the given combination .

DL2CA3400

A. 0043AC2LD

B. 0043AC2LD

C. 0043AC2LD

D. 0043AC2LD

**Answer: A**



**Watch Video Solution**

**11.** In each of the following questions , you are given a combination of letters or/and numbers followed by four alternatives (a),(b) ,(c) ,(d) . Choose the alternative which most closely resembles the water image of the given



combination .

Monday

A. yadnom

B. yadnom

C. yadnom

D. yadnom

**Answer: D**



**View Text Solution**

12. In each of the following questions , you are given a combination of letters or/and numbers followed by four alternatives (a),(b) ,(c) ,(d) . Choose the alternative which most closely resembles the water image of the given combination .

rise

A. **L12G**

B. esir

C. **1i29**

D.

9217

**Answer: A**



**Watch Video Solution**

**13.** In each of the following questions , you are given a combination of letters or/and numbers followed by four alternatives (a),(b) ,(c) ,(d) . Choose the alternative which most closely resembles the water image of the given

combination .

wrote

A. **W1019**

B. **W1019**

C. **W1019**

D. **W1019**

**Answer: C**



**Watch Video Solution**

14. In each of the following questions , you are given a combination of letters or/and numbers followed by four alternatives (a),(b) ,(c) ,(d) . Choose the alternative which most closely resembles the water image of the given combination .

bridge

A. ρ1!q&e

B. ρ1!q&e

C. ρ1!q&e

D. ριρδϵ

**Answer: B**

 [Watch Video Solution](#)

**15.** In each of the following questions , you are given a combination of letters or/and numbers followed by four alternatives (a),(b) ,(c) ,(d) . Choose the alternative which most closely resembles the water image of the given

combination .

national

A. [national]

B. [national]

C. [national]

D. [national]


**Answer: D**



**View Text Solution**

## Exericse 2


1. In each of the following questions, choose the correct water image of the figure (X) from amongst the four alternatives (a),(b) , (c) , (d) given alongwith it .



A.







B.



C.



D.

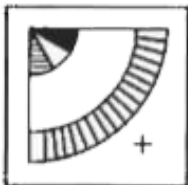
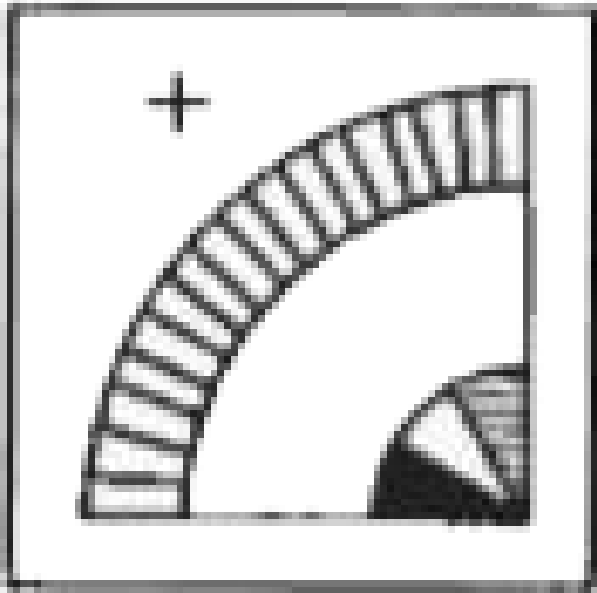
**Answer: A**



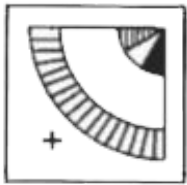
**Watch Video Solution**

2. In each of the following questions, choose the correct water image of the figure (X) from

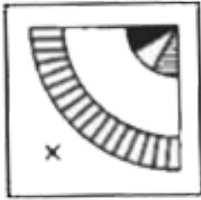
amongst the four alternatives (a),(b) , (c) , (d)  
given alongwith it .



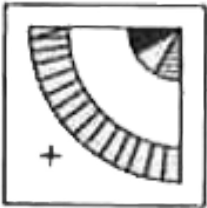
A.



B.



C.



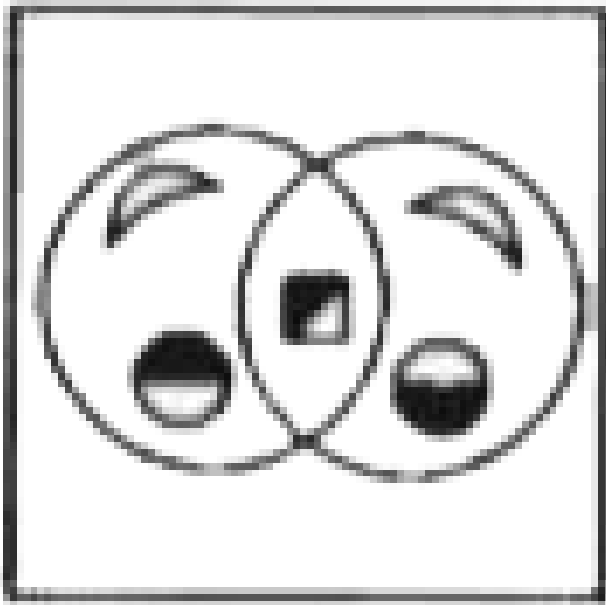
D.

**Answer: D**

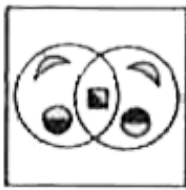


**Watch Video Solution**


3. In each of the following questions, choose the correct water image of the figure (X) from amongst the four alternatives (a),(b) , (c) , (d) given alongwith it .




A.




B.



C.



D.

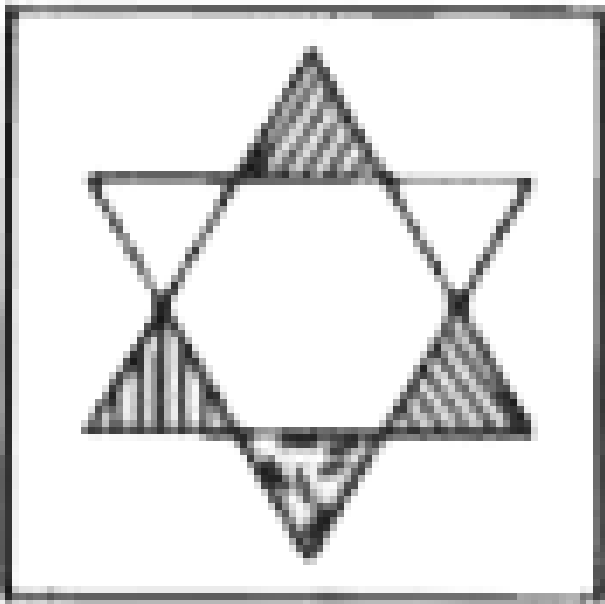


**Answer: D**



**Watch Video Solution**

4. In each of the following questions, choose the correct water image of the figure (X) from amongst the four alternatives (a),(b) , (c) , (d) given alongwith it .



A.



B.



C.



D.

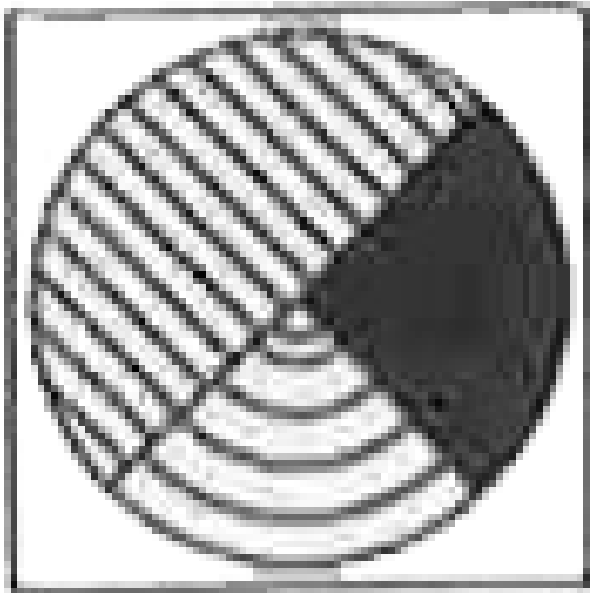


**Answer: D**



**Watch Video Solution**

5. In each of the following questions, choose the correct water image of the figure (X) from amongst the four alternatives (a),(b) , (c) , (d) given alongwith it .

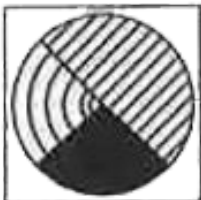




A.




B.



C.



D.

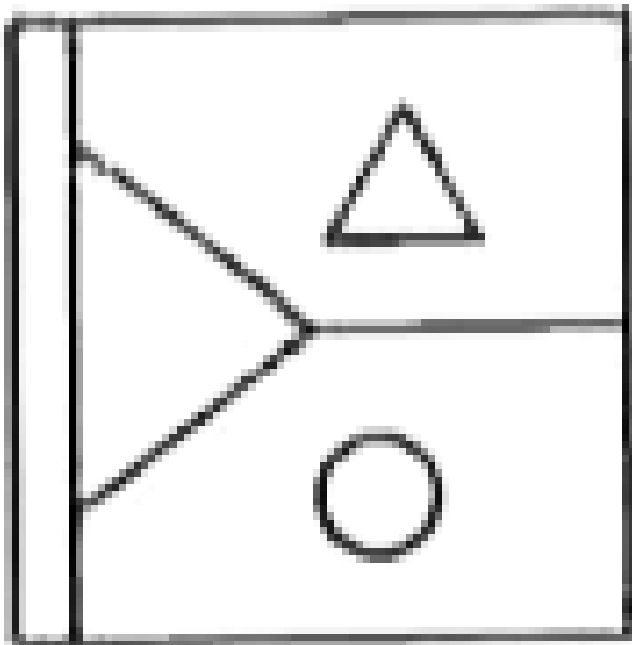


**Answer: D**

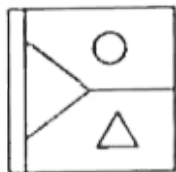


**Watch Video Solution**

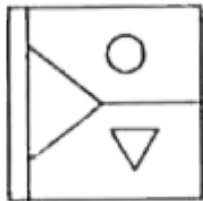
6. In each of the following questions, choose the correct water image of the figure (X) from amongst the four alternatives (a),(b) , (c) , (d) given alongwith it .



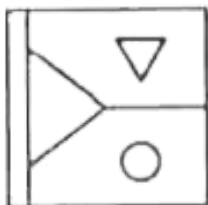
A.



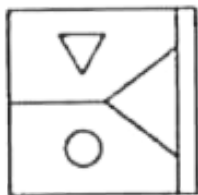
B.



C.



D.




**Answer: B**




**Watch Video Solution**

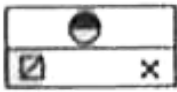
7. In each of the following questions, choose the correct water image of the figure (X) from amongst the four alternatives (a),(b) , (c) , (d) given alongwith it .



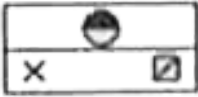
A.




B.



C.



D.



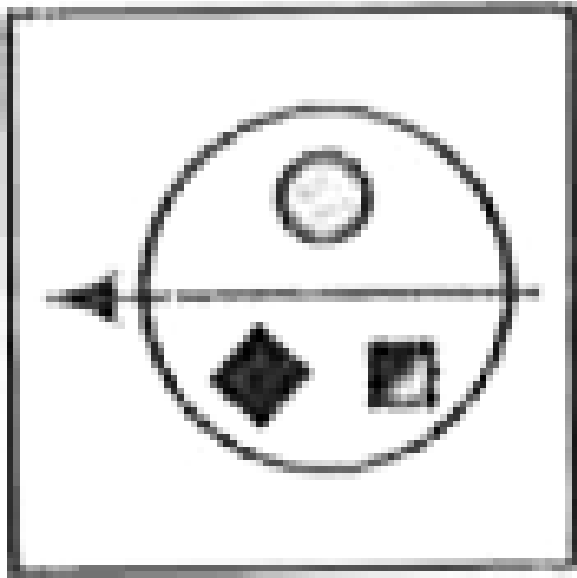
**Answer: C**



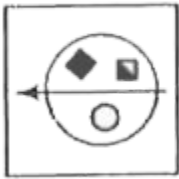
**Watch Video Solution**

**8.** In each of the following questions, choose the correct water image of the figure (X) from amongst the four alternatives (a),(b) , (c) , (d)

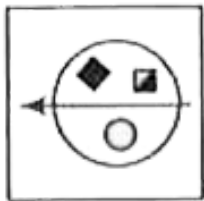
given alongwith it .



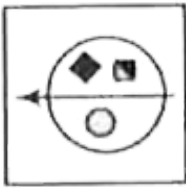
A.



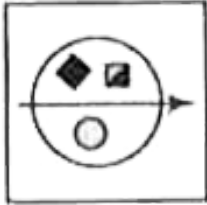
B.



C.



D.



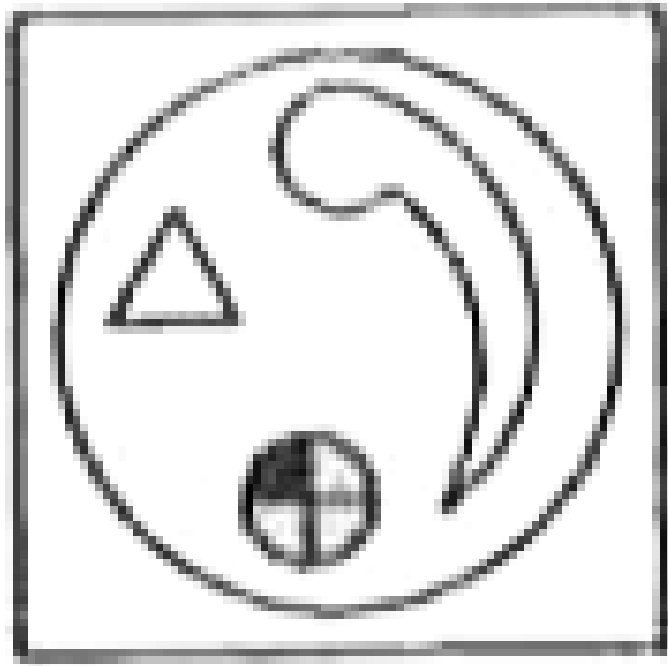
**Answer: A**



**Watch Video Solution**

9. In each of the following questions, choose the correct water image of the figure (X) from amongst the four alternatives (a),(b) , (c) , (d)

given alongwith it .





B.



C.



D.

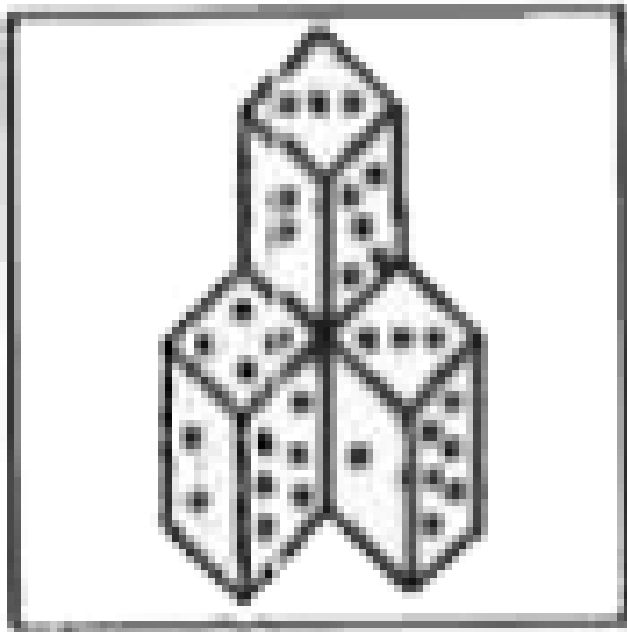


**Answer: C**




**Watch Video Solution**


**10.** In each of the following questions, choose the correct water image of the figure (X) from amongst the four alternatives (a),(b) , (c) , (d) given alongwith it .



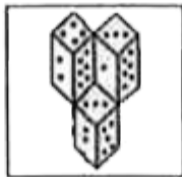
A.



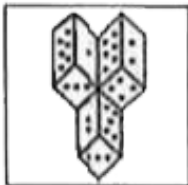
B.



C.



D.

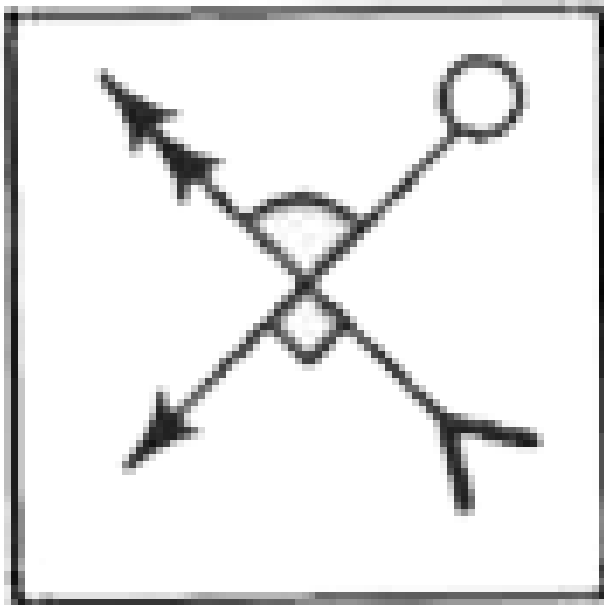


**Answer: B**

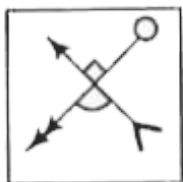


**Watch Video Solution**

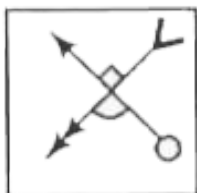
**11.** In each of the following questions, choose the correct water image of the figure (X) from amongst the four alternatives (a),(b) , (c) , (d) given alongwith it .



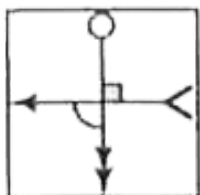
A.



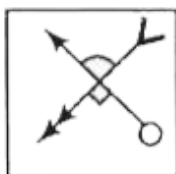
B.



C.



D.




**Answer: A**



**Watch Video Solution**

**12.** In each of the following questions, choose the correct water image of the figure (X) from amongst the four alternatives (a),(b) , (c) , (d) given alongwith it .

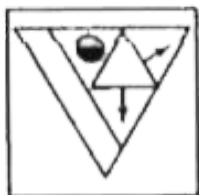


.....

A.



B.



C.



D.



**Answer: D**



**View Text Solution**

