



MATHS

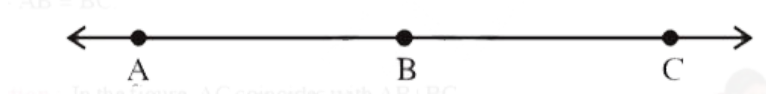
NCERT - NCERT

MATHEMATICS(BENGALI ENGLISH)

THE ELEMENTS OF GEOMETRY

Examples

1. If A,B,C are three points on a line and B lies between A and C, then prove that $AC-AB = BC$



Watch Video Solution

2. Prove that an equilateral triangle can be constructed on any given line segment.



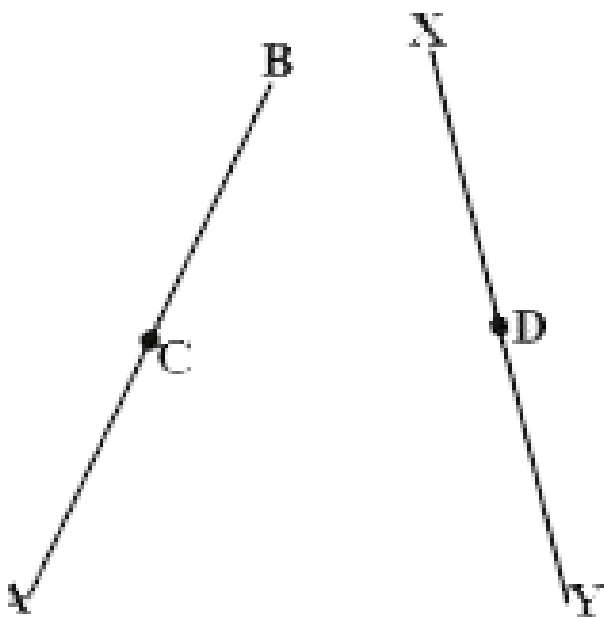
Watch Video Solution

3. Two distinct lines cannot have more than one point in common. Explain?



Watch Video Solution

4. In the adjacent figure, we have $AC = XD$, C and D are mid points of AB and XY respectively. Show that $AB = XY$.



Watch Video Solution

Try This

1. Can you give any two axioms from your daily life.



Watch Video Solution

Exercise 3 1

1. Answer the following:

(i) How many dimensions a solid has?

(ii) How many books are there in Euclid's Elements?

(iii) Write the numbers of faces of a cube and cuboid?

(iv) What is sum of interior angles of a triangle?

(v) Write three un-defined terms of geometry?



Watch Video Solution

2. State whether the following statements are true or false? Also give reasons for your answers.

a) Only one line can pass through a given point.

b) All right angles are equal.

c) Circles with same radii are equal.

d) A line segment can be extended on its both sides endlessly to get a straight line.



e) From the figure, $AB > AC$.



Watch Video Solution

3. In the figure given below, show that length

$$AH > AB + BC + CD.$$



Watch Video Solution

4. If a point Q lies between two points P and R such that $PQ = QR$, prove that $PQ = \frac{1}{2} PR$.



Watch Video Solution

5. Draw an equilateral triangle whose sides are 5.2 cm. each



Watch Video Solution

6. What is a conjecture ? Give an example for it.



Watch Video Solution

7. Mark two points P and Q. Draw a line through P and Q.

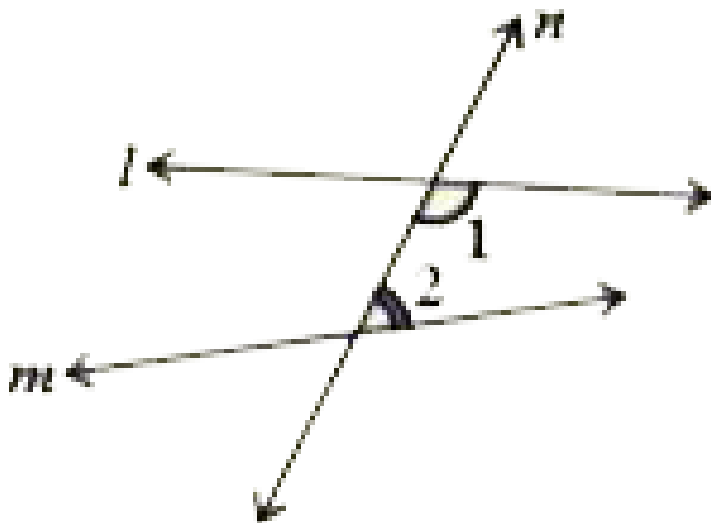
Now how many lines are parallel to PQ, can you draw?



Watch Video Solution

8. In the adjacent figure, a line n falls on lines l and m such that the sum of the interior angles 1 and 2 is less than 180° , then what can you say

about lines l and m .



Watch Video Solution

9. In the adjacent figures, If $\angle 1 = \angle 3$, $\angle 2 = \angle 4$ and $\angle 3 = \angle 4$ write the relations between $\angle 1$ and $\angle 2$ using an Euclid's

postulate.

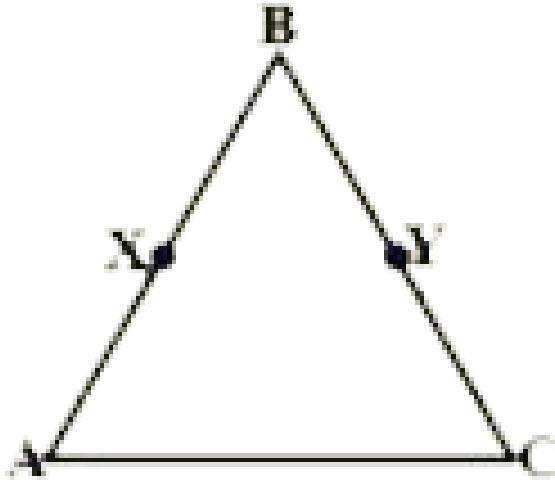


Watch Video Solution

10. In the adjacent figure, we have

$BX = \frac{1}{2}AB$, $BY = \frac{1}{2}BC$ and $AB=BC$. Show

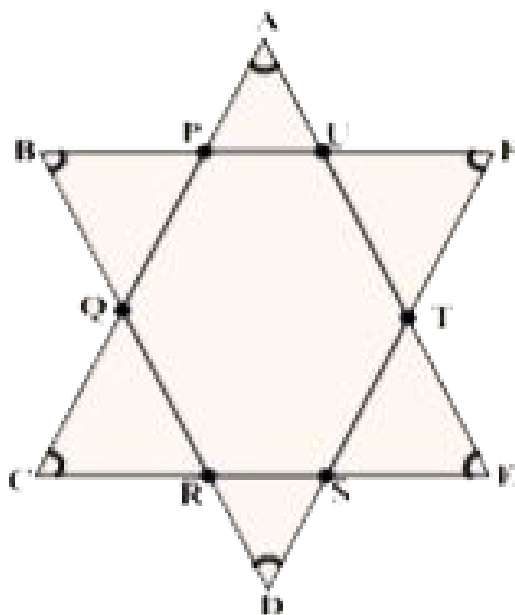
that $BX = BY$.



Watch Video Solution

Brain Teaser

1. What is the measure of $\angle A + \angle B + \angle C + \angle D + \angle E + \angle F$ in the figure given below. Give reason to your answer.



Watch Video Solution

2. If the diagonal of a square is 'a' units, what is the diagonal of the square, whose area is double that of the first square?



Watch Video Solution