



MATHS

BOOKS - TARGET MATHS (HINGLISH)

MODEL QUESTION PAPER

Questions

1. Write the converse statement of the following statement : If a quadrilateral is a rhombus then its diagonals are perpendicular bisectors of each

other . Also state whether the converse statement is true .



[Watch Video Solution](#)

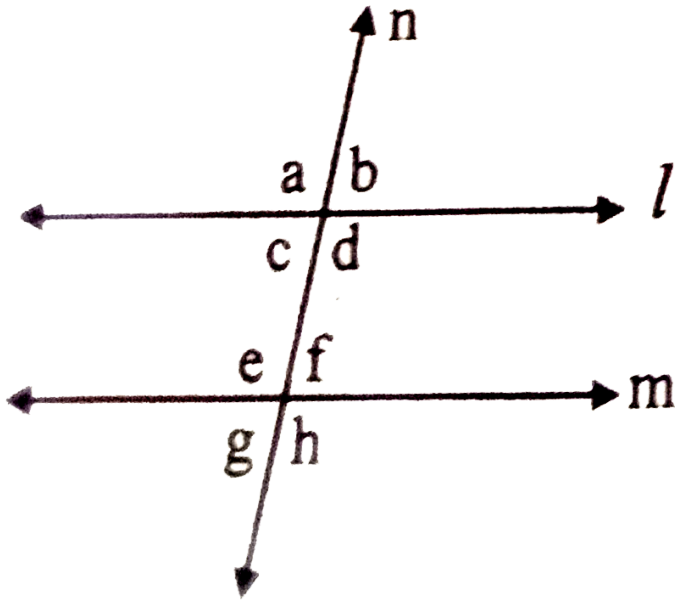
2. Write the equation of a line parallel to X-axis and at a distance 3 cm above it.



[Watch Video Solution](#)

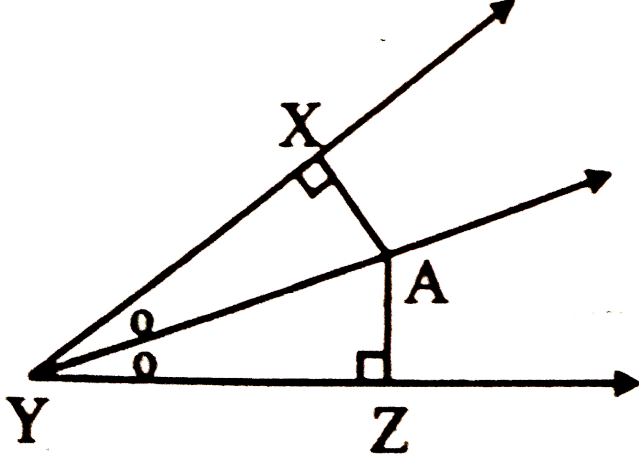
3. As shown in the figure, if lines l and m are parallel, then write algebraic equations using the

property of interior angles.



[Watch Video Solution](#)

4. In the given figure, point A is on the bisector of $\angle XYZ$. If $AX = 5.5\text{cm}$, then find AZ .



Watch Video Solution

5. Find the value of $\frac{\sin 32^\circ}{\cos 58^\circ}$



Watch Video Solution

6. Curved surface area of a cylinder is 440cm^2 and the radius of its base is 7 cm. Find the height of the cylinder.



[Watch Video Solution](#)

7. If the two sides and an angle of a triangle is given, it is possible to draw that triangle' Is the above statement correct ? Justify.



[Watch Video Solution](#)

8. Draw a circle of any radius. Draw diameter PQ.

Take 3 points S, T and U any where on the circle.

Measure $\angle PSQ$, $\angle PTQ$ and $\angle PUQ$. What do

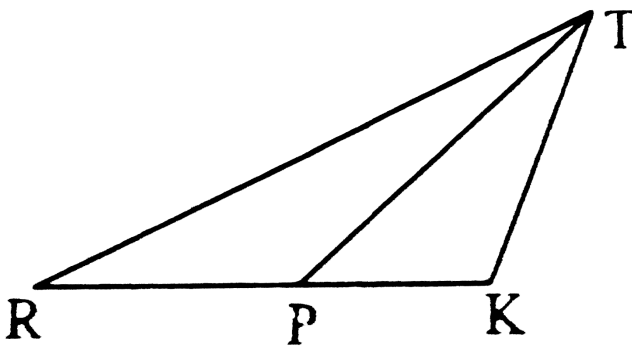
you observe?



Watch Video Solution

9. In the figure, $RP : PK = 11 : 8$, then

$$\frac{A(\Delta TRP)}{A(\Delta TPK)} =$$



A. 11 : 8

B. 8 : 11

C. 19 : 11

D. 11 : 19

Answer:



Watch Video Solution

10. If $\tan \theta = \frac{3}{4}$, then $\cos^2 \theta - \sin^2 \theta = \frac{7}{25}$ (b)

1 (c) $-\frac{7}{25}$ (d) $\frac{4}{25}$

A. $\frac{3}{25}$

B. $\frac{4}{25}$

C. $\frac{7}{25}$

D. $\frac{9}{25}$

Answer:



Watch Video Solution

11. The ratio of circumference and area of a circle is 2: 7. Find its circumference.

A. 14π

B. $\frac{7}{\pi}$

C. 7π

D. $\frac{14}{\pi}$

Answer:



Watch Video Solution

12. Find the curved surface area of a cone of radius 7 cm and height 24 cm.

A. 440cm^2

B. 550cm^2

C. 330cm^2

D. 110cm^2

Answer:



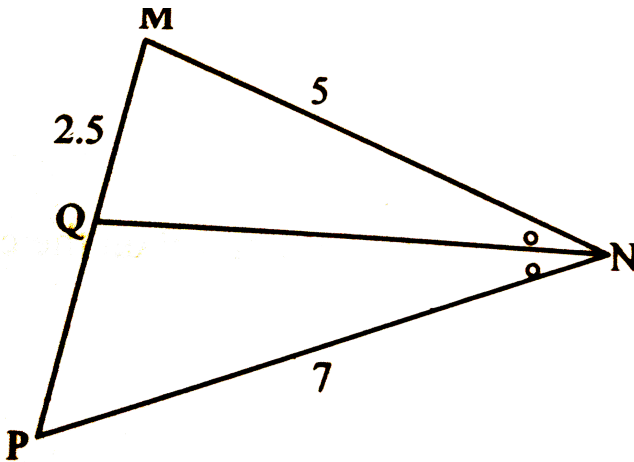
Watch Video Solution

13. Find the area of sector whose arc length and radius are 20 cm and 8 cm respectively.



Watch Video Solution

14. In $\triangle MNP$, NQ is a bisector of angle N. If $MN = 5$, $PN = 7$, $MQ = 2.5$, then find QP



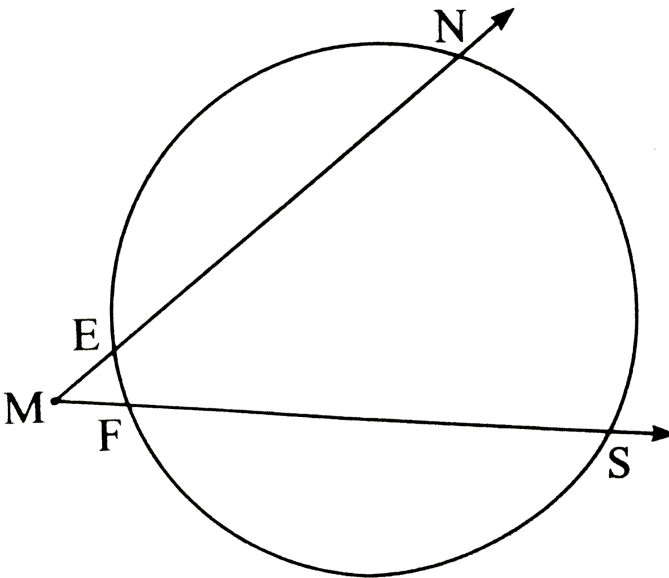
Watch Video Solution

15. In the figure,

$$m(\text{arc } NS) = 125^\circ$$

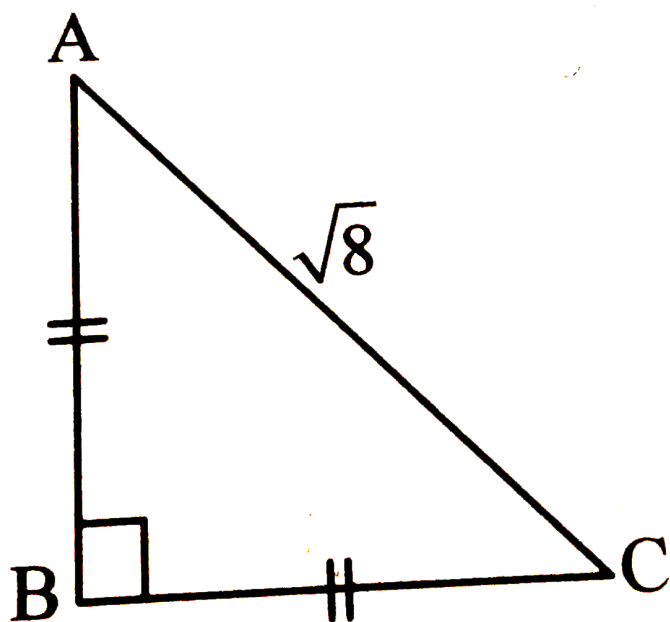
$$m(\text{arc } EF) = 37^\circ$$

find the measure $\angle NMS$,



Watch Video Solution

16. For finding AB and BC with the help of information given in the adjoining figure, complete the following activity.



Watch Video Solution

17. Theorem: The ratio of the areas of two triangles is equal to the ratio of the product of their bases and corresponding heights.

To prove the above theorem,

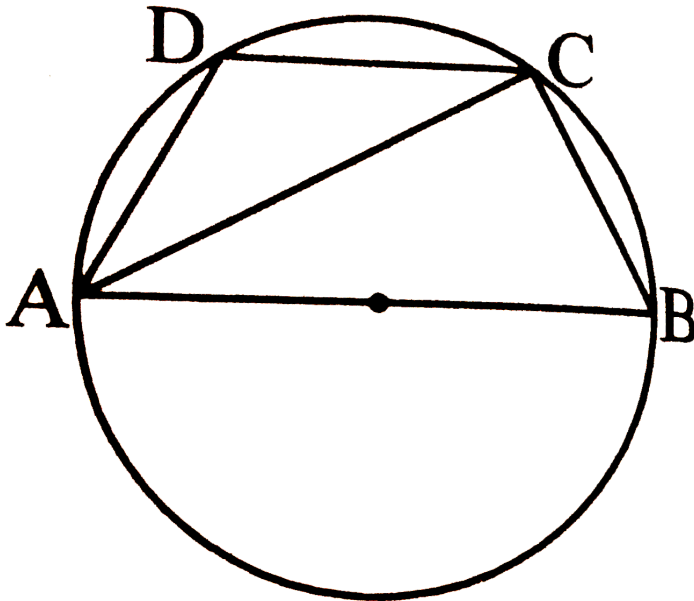
a. Draw two triangles, and show their bases and heights.

b. Write 'given' and 'to prove' from the figures drawn.



Watch Video Solution

18. In the figure, $\square ABCD$ is a cyclic quadrilateral. seg AB is a diameter. If $\angle ADC = 120^\circ$, find the measure of $\angle BAC$.



Watch Video Solution

19. Draw a circle of radius 2.5cm. Take a point P at a distance of 8 cm from its centre. Construct a pair of tangents from the point P to the circle.



Watch Video Solution

20. Prove that:

$$\sec \theta + \tan \theta = \frac{\cos \theta}{1 - \sin \theta}.$$



Watch Video Solution

21. Find the co-ordinates of point P if P divides the line segment joining the points $A(-1, 7)$ and $B(4, -3)$ in the ratio 2:3



[Watch Video Solution](#)

22. A storm broke a tree and the treetop rested 20 m from the base of the tree, making an angle of 60° with the horizontal. Find the height of the tree.



[Watch Video Solution](#)

23. Draw a circle of radius 2.5cm. Take a point P at a distance of 8 cm from its centre. Construct a pair of tangents from the point P to the circle.



Watch Video Solution

24. In the adjoining figure, if A is the centre of the circle, $\angle PAR = 30^\circ$, $AP = 7.5$, find the area of the segment PQR. ($\pi = 3.14$)



Watch Video Solution

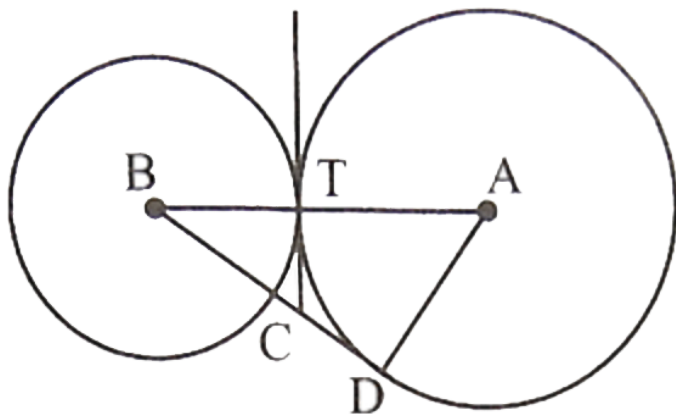
25. Prove that, in a right-angled triangle, the square of hypotenuse is equal to the sum of the square of remaining two sides.



Watch Video Solution

26. Two circles with centres at A and B touch each other externally at T. Let BD is the tangent at D and TC is a common tangent. If AT has length 3 units and BT has length 2 units, then

the length (in units) of CB is



[Watch Video Solution](#)

27. Prove that the tangent at any point of circle is perpendicular to the radius through the point of contact.



[Watch Video Solution](#)

28. If a and b are natural numbers and $a > b$, then show that $(a^2 + b^2), (a^2 - b^2), (2ab)$ is a Pythagorean triplet. Find two Pythagorean triplets using any convenient values of a and b .



[Watch Video Solution](#)

29. If _____ in

$\triangle ABC$, $\angle A = 4x^\circ$, $\angle B = 2x^\circ$ and $\angle C = 4y^\circ$,

then write a linear equation in two variables showing relation between x and y .



[Watch Video Solution](#)



[Watch Video Solution](#)

30. State if $3\sqrt{71}$ is a surd justify.



[Watch Video Solution](#)

31. The marks obtained by students in a Maths test are given below. Find their mode.

18,19,17,12,20,19,18,17,18,11.



[Watch Video Solution](#)

32.

If

$$(3\sqrt{5} - 6\sqrt{7}) - (2\sqrt{5} - 11\sqrt{7}) = a\sqrt{5} + b\sqrt{7},$$

then find the values of a and b.



[Watch Video Solution](#)

33. Mr., Ajit's payable amount of income tax is Rs. 8000. He has to pay education cess at 3% on income tax. How much total income tax will he have to pay ?



[Watch Video Solution](#)

34. Determine if $x+4$ is a factor of $x^3 - 12x - 16$ or not.



Watch Video Solution

35. 3 pencils and 4 pens cost *Rs.* 270 while 4 pencils and 3 pens cost *Rs.* 150 . Find the combined cost of pencil and a pen.



Watch Video Solution

36. A survey was conducted to know the hobbies of 50 students in a class. 24 students like painting, 18 students like singing, and 15 students like both. Represent this information using Venn diagram. Find the number of students who like neither painting nor singing?



Watch Video Solution

37. For an A.p., if $a = 8$, $d = -2$, then $t_{17} =$

A. 24

B. -24

C. 40

D. -40

Answer:



Watch Video Solution

38. The rate of GST on metal product is 28%, then the rate of SGST is ____.

A. 18 %

B. 14 %

C. 36 %

D. 1.4 %

Answer:



Watch Video Solution

39. Two different coins are tossed simultaneously. The probability of getting at least one head is $\frac{1}{4}$ (b) $\frac{1}{8}$ (c) $\frac{3}{4}$ (d) $\frac{7}{8}$

A. 1

B. $\frac{1}{2}$

C. $\frac{1}{4}$

D. $\frac{3}{4}$

Answer:



Watch Video Solution

40. If α and β are the roots of the quadratic equation $x^2 - 3x - 2 = 0$, then $\frac{\alpha}{\beta} + \frac{\beta}{\alpha} =$

A. $\frac{3}{2}$

B. $\frac{-3}{2}$

C. $\frac{13}{2}$

D. $\frac{-13}{2}$

Answer:



Watch Video Solution

41. Find the sum of all even numbers between 270 and 345.



Watch Video Solution

42. Solve using formula.

$$5x^2 + 13x + 8 = 0$$



Watch Video Solution

43. From the given determinants, from two simultaneously equations and solve them.

$$\begin{vmatrix} 2 & y \\ -3 & x \end{vmatrix} = 7, \begin{vmatrix} 3 & y \\ 1 & x \end{vmatrix} = 5$$



Watch Video Solution

44. Compare the quadratic equation

$$13\sqrt{3}x^2 + 10x + \sqrt{3} = 0 \quad \text{with}$$

$$ax^2 + bx + c = 0 \quad \text{and find the value of the}$$

discriminant. Hence, write the nature of the

roots.



Watch Video Solution

45. *Solve:* $4x + 3y = 69$, $3x - 2y = 5$



Watch Video Solution

46. On 1th Jan. 2016, Sanika decides to save ₹10, ₹11 on second day, ₹12 on third day. If she decides to save like this, then on 31th December 2016 what would be her total saving?



Watch Video Solution

47. Solve the simultaneous equations by using Graphical method

$$2x + y = 6, 3x + 4y = 4$$



Watch Video Solution

48. For an arithmetic progression, first term is -7 and the last term is 53 . If the sum of all the terms is 483 , then find the number of terms and the common difference.



Watch Video Solution

49. If the face value of both the shares is same then which investment out of the following is more profitable ?

Company A: dividend 16% MV = Rs 80

Company B: dividend 20% MV = Rs 120

 [Watch Video Solution](#)

50. The difference between two positive integers is 2 and the difference between their cubes is 56. Find the numbers.

 [Watch Video Solution](#)

51. The following determinants are obtained from the simultaneous equations in variables x and y .

$$D_x = \begin{vmatrix} -11 & a \\ 9 & -4 \end{vmatrix}, D_y = \begin{vmatrix} 3 & -11 \\ b & 9 \end{vmatrix}, D = \begin{vmatrix} 3 & 2 \\ 7 & -4 \end{vmatrix}$$

The solutions of the equations are $x=-1$ and $y=-4$.

Find the values of a and b . Also find the original simultaneous equations having this solution.



Watch Video Solution