

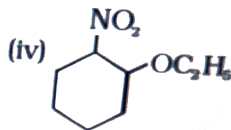
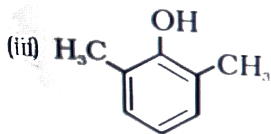
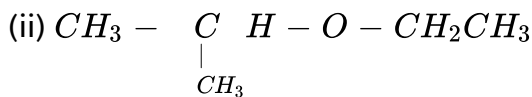
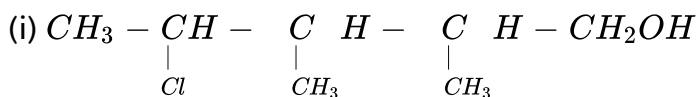
CHEMISTRY

NCERT - NCERT CHEMISTRY(HINGLISH)

ALCOHOLS, PHENOLS AND ETHERS

Solved Examples

1. Give IUPAC names of the following compounds:



Watch Video Solution

2. Give the structures and IUPAC names of the products expected from the following reactions:

(a) Catalytic reduction of butanal.

(b) Hydration of propene in the presence of dilute sulphuric acid.

(c) Reaction of propanone with methylmagnesium bromide followed by hydrolysis.

 [Watch Video Solution](#)

3. Arrange the following sets of compounds in order of their increasing boiling points:

(a) Pentan-1-ol, butan-1-ol, butan-2-ol, ethanol, propan-1-ol, methanol.

(b) Pentan-1-ol, n-butane, pentanal, ethoxyethane.

 [Watch Video Solution](#)

4. Arrange the following compounds in increasing order of their acid strength: Propan-1-ol, 2,4,6-trinitrophenol, 3-nitrophenol, 3,5-dinitrophenol, phenol, 4-methylphenol.

 [Watch Video Solution](#)

5. Write the structures of the major products expected from the following reactions:

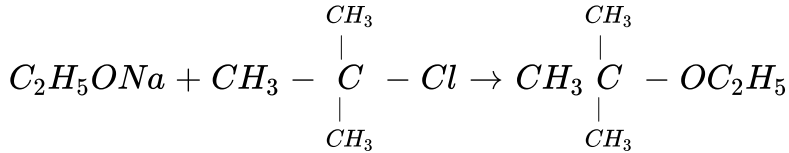
(a) Mononitration of 3-methylphenol

(b) Dinitration of 3-methylphenol

(c) Mononitration of phenyl methanoate.

 [Watch Video Solution](#)

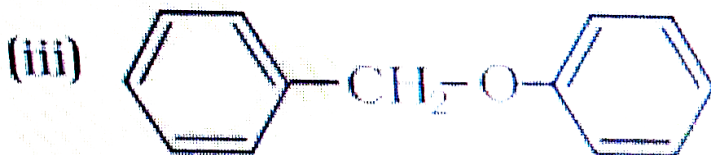
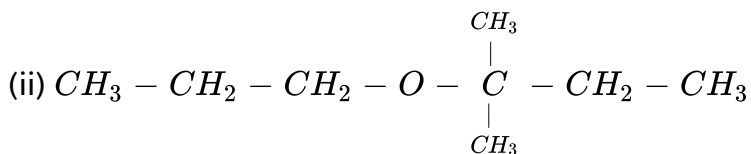
6. The following is not an appropriate reaction for the preparation of t-butyl ethyl ether.



- (i) What would be the major product of this reaction ?
- (ii) Write a suitable reaction for the preparation of t-butylethyl ether.

 [Watch Video Solution](#)

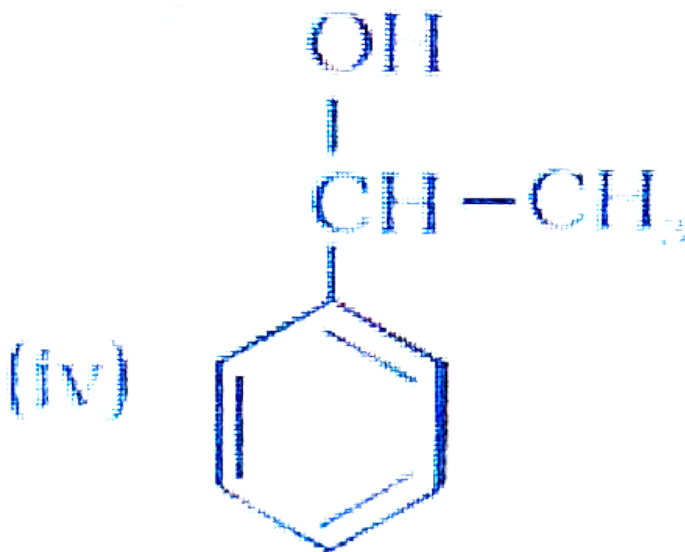
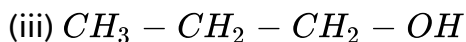
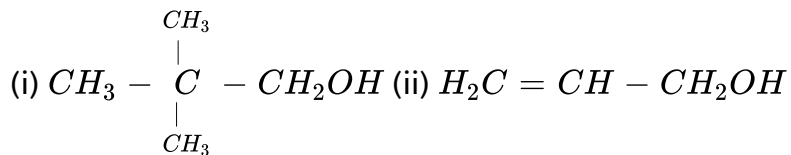
7. Give the major products that are formed by heating each of the following ethers with HI.



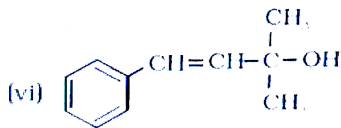
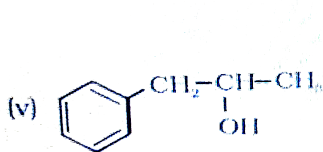
(iii)

 [Watch Video Solution](#)

1. Classify the following as primary, secondary and tertiary alcohols:



(iv)





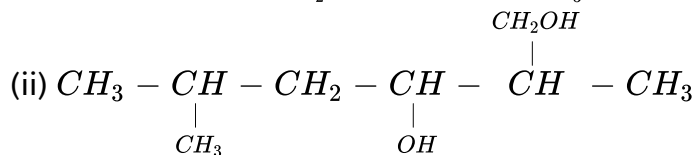
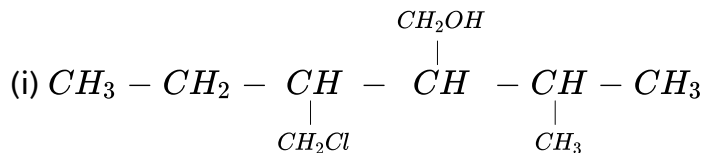
Watch Video Solution

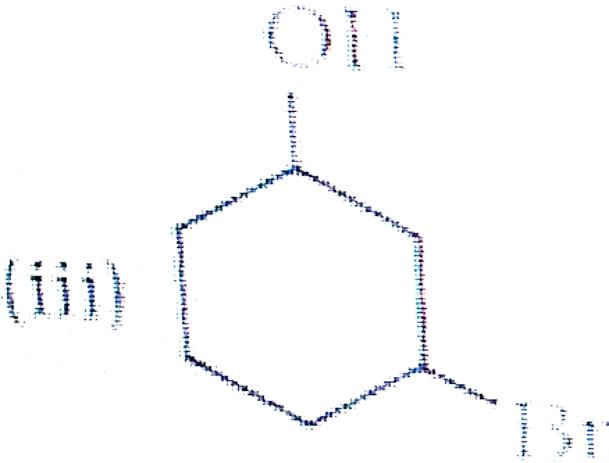
2. Identify allylic alcohols in the above examples.



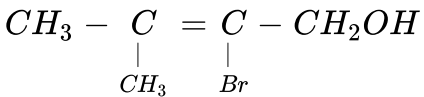
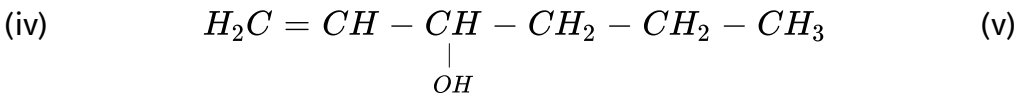
View Text Solution

3. Name the following compounds according to IUPAC system.



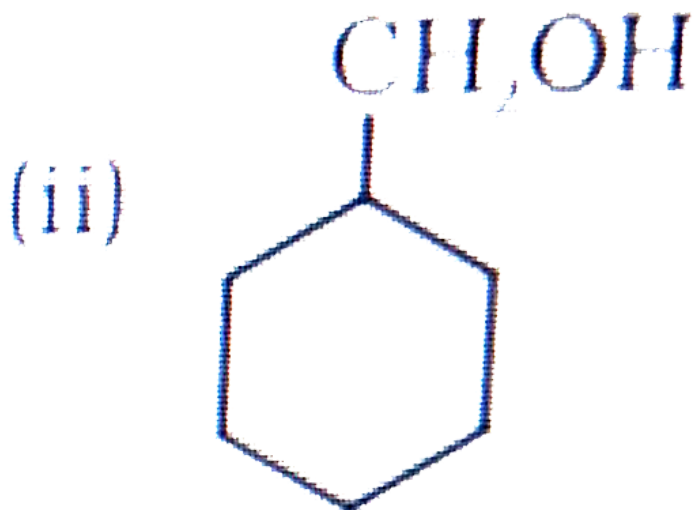
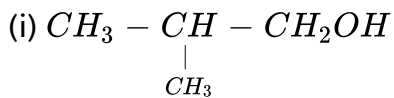


(iii)



 [View Text Solution](#)

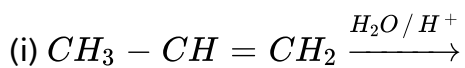
4. Show how are the following alcohols prepared by the reaction of a suitable Grignard reagent on methanal ?

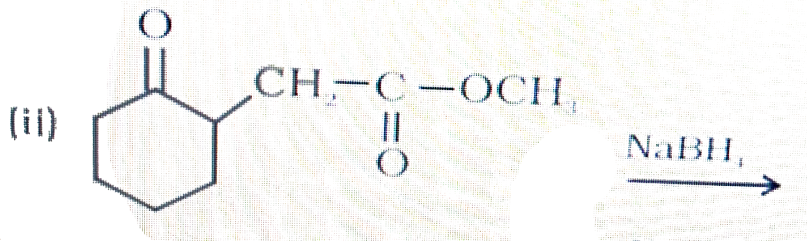


(ii)

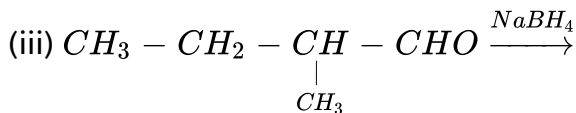
 [Watch Video Solution](#)

5. Write structures of the products of the following reactions:





(ii)



 [Watch Video Solution](#)

6. Give structures of the products you would expect when each of the following alcohol reacts with (a) $\text{HCl} - \text{ZnCl}_2$ (b) HBr and (c) SOCl_2 .

(i) Butan-1-ol

(ii) 2-Methylbutan-2-ol

 [Watch Video Solution](#)

7. Predict the major product of acid catalysed dehydration of

(i) 1-methylcyclohexanol and (ii) butan-1-ol

 [Watch Video Solution](#)

8. Ortho and para nitrophenols are more acidic than phenol. Draw the resonance structures of the corresponding phenoxide ions.

 [Watch Video Solution](#)

9. Write the equations involved in the following reactions:

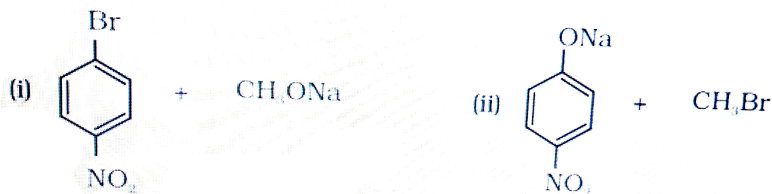
(i) Reimer - Tiemann reaction (ii) Kolbe's reaction

 [Watch Video Solution](#)

10. Write the reactions of Williamson synthesis of 2-ethoxy-3-methylpentane starting from ethanol and 3-methylpentan-2-ol.

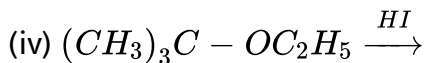
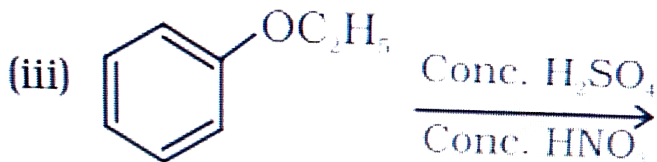
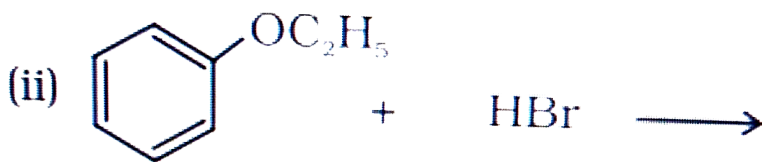
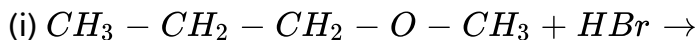
 [Watch Video Solution](#)

11. Which of the following is an appropriate set of reactants for the preparation of 1-methoxy-4-nitrobenzene and why?



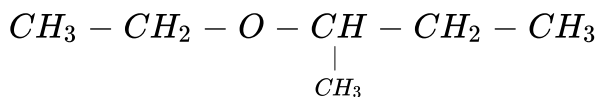
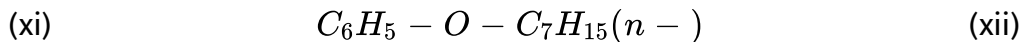
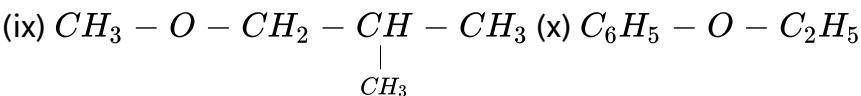
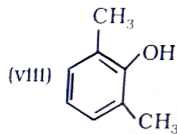
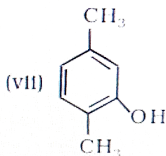
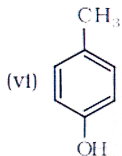
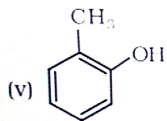
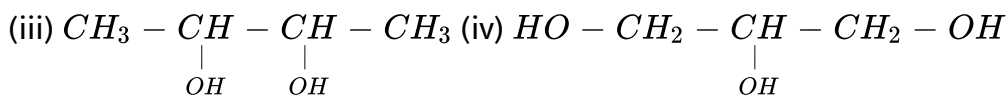
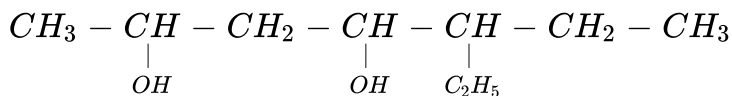
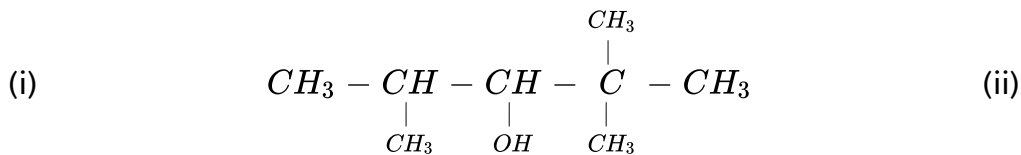
 [Watch Video Solution](#)

12. Predict the products of the following reactions:



 [Watch Video Solution](#)

13. Write IUPAC names of the following compounds:



[View Text Solution](#)

14. Write structures of the compounds whose IUPAC names are as follows:

(i) 2-Methylbutan-2-ol

(ii) 1-Phenylpropan-2-ol

(iii) 3,5-Dimethylhexane -1, 3, 5-triol

(iv) 2,3 - Diethylphenol

(v) 1 - Ethoxypropane

(vi) 2-Ethoxy-3-methylpentane

(vii) Cyclohexylmethanol

(viii) 3-Cyclohexylpentan-3-ol

(ix) Cyclopent-3-en-1-ol

(x) 4-Chloro-3 ethylbutan-1-ol.

 [Watch Video Solution](#)

15. i. Draw the structures of all isomeric alcohols of molecular formula $C_5H_{12}O$ and give their IUPAC names.

ii. Classify the isomers of alcohols in Q.No.15 (i) as primary, secondary, and tertiary alcohols.

 [Watch Video Solution](#)

16. Explain why propanol has a higher boiling point than hydrocarbon butane ?

 [Watch Video Solution](#)

17. Alcohols are comparatively more soluble in water than hydrocarbons of comparable molecular masses. Explain this fact.

 [Watch Video Solution](#)

18. What is meant by hydroboration-oxidation reaction ? Illustrate it with an example.

 [Watch Video Solution](#)

19. Give the structures and IUPAC names of monohydric phenols of molecular formula, C_7H_8O .

 [Watch Video Solution](#)

20. While separating a mixture of ortho- and para-nitrophenols steam distillation, name the isomer which will be steam volatile. Give reason.

 [Watch Video Solution](#)

21. Give the equations of reaction for the preparation of phenol from cumene.

 [Watch Video Solution](#)

22. Write the chemical reaction for the preparation of phenol from chlorobenzene.

 [Watch Video Solution](#)

23. Write the mechanism of hydration of ethene to yield ethanol.

 [Watch Video Solution](#)

[Watch Video Solution](#)

24. You are given benzene, conc. H_2SO_4 , and NaOH. Write the equations for the preparation of phenol using these reagents.

[Watch Video Solution](#)

25. Show how will you synthesise:

- i. 1-Phenylethanol from a suitable alkene.
- ii. Cyclohexylmethanol using an alkyl halide by SN^2 reaction.
- iii. Pentan-1-ol using a suitable alkyl halide.

[Watch Video Solution](#)

26. Give two reactions that show the acidic nature of phenol. Compare the acidity of phenol with that of ethanol.

[Watch Video Solution](#)

27. Explain why is ortho-nitrophenol more acidic than ortho-methoxyphenol ?

 [Watch Video Solution](#)

28. Explain how does the ($-OH$) group attached to a carbon of benzene ring activate it towards electrophilic substitution.

 [Watch Video Solution](#)

29. Give the equations of the following reactions:

i. Oxidation of propan-1-ol with alkaline $KMnO_4$ solution.

ii. Bromine in CS_2 with phenol.

iii. Dilute HNO_3 with phenol.

iv. Treating phenol with chloroform in the presence of aqueous NaOH.

 [Watch Video Solution](#)

30. Explain the following with an example:

- i. Kolbe's reaction
- ii. Reimer-Tiemann reaction
- iii. Williamson's ether synthesis
- iv. Unsymmetrical ether

 [Watch Video Solution](#)

31. Write the mechanism of acid dehydration of ethanol to yield ethene.

 [Watch Video Solution](#)

32. How are the following conversions carried out ?

- i. Propene \rightarrow Propan-2-ol
- ii. Benzyl chloride \rightarrow Benzyl alcohol
- iii. Ethyl magnesium chloride \rightarrow Propan-1-ol
- iv. Methyl magnesium bromide \rightarrow 2-Methylpropan-2-ol

 [Watch Video Solution](#)

33. Name the reagents used in the following reactions:

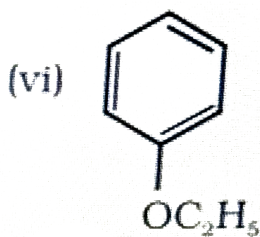
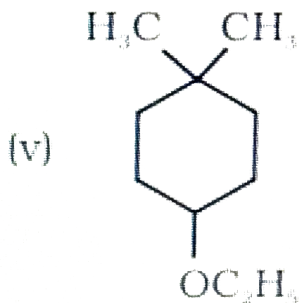
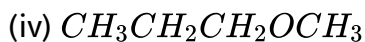
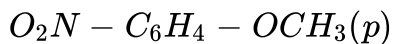
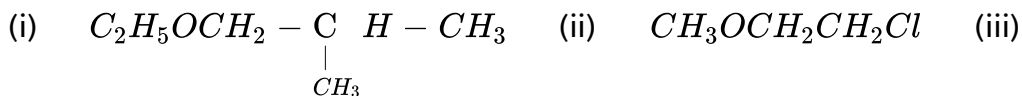
- i. Oxidation of a primary alcohol to carboxylic acid.
- ii. Oxidation of a primary alcohol to aldehyde.
- iii. Bromination of phenol to 2,4,6-tribromophenol.
- iv. Benzyl alcohol to benzoic acid.
- v. Dehydration of propan-2-ol to propene.
- vi. Butan-2-one to butan-2-ol.

 [Watch Video Solution](#)

34. Give reason for the higher boiling point of ethanol in comparison to methoxymethane.

 [Watch Video Solution](#)

35. Give IUPAC names of the following ethers:



 [Watch Video Solution](#)

36. Write the names of reagents and equations for the preparation of following ethers by Williamson's synthesis:

i. 1-Propoxypropane

ii. Ethoxybenzene

iii. 2-Methoxy-2-methylpropane

iv. 1-Methoxyethane

 [Watch Video Solution](#)

37. Illustrate with examples the limitations of Williamson's synthesis for the preparation of certain types of ethers.

 [Watch Video Solution](#)

38. How is 1-propoxypropane synthesised from propan-1-ol ? Write mechanism of the reaction.

 [Watch Video Solution](#)

39. Preparation of ethers by acid dehydration of secondary or tertiary alcohols is not a suitable method. Give reason.

 [Watch Video Solution](#)

 [Watch Video Solution](#)

40. Write the equation of the reaction of hydrogen iodide with :

(i) 1-propoxypropane, (ii) methoxybenzene, (iii) benzyl ethyl ether.

 [Watch Video Solution](#)

41. Explain the fact that in aryl ethers, (i) the alkoxy group activates the benzene ring towards electrophilic substitution and (ii) it directs the incoming substituents to ortho and para positions in benzene ring.

 [Watch Video Solution](#)

42. Write the mechanism of the reaction of HI with methoxymethane.

 [Watch Video Solution](#)

43. Write the equations of the following reactions:

i. Friedel-Crafts reaction - alkylation of anisole.

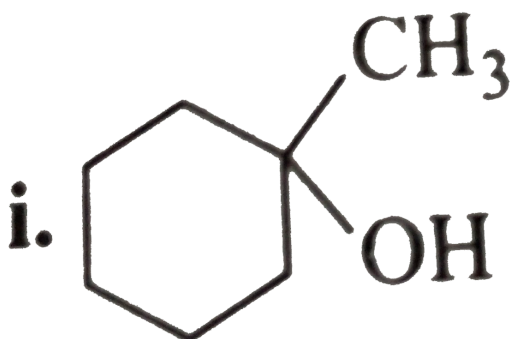
ii. Nitration of anisole.

iii. Bromination of anisole in ethanoic acid medium.

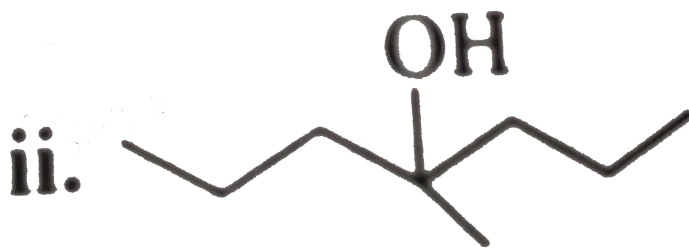
iv. Friedel-Crafts acetylation of anisole.

 [Watch Video Solution](#)

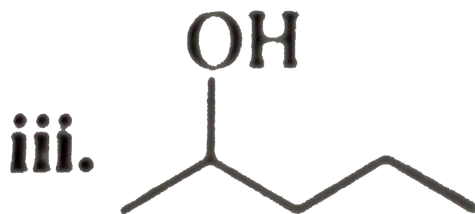
44. Show how would you synthesise the following alcohols from appropriate alkenes.



i.

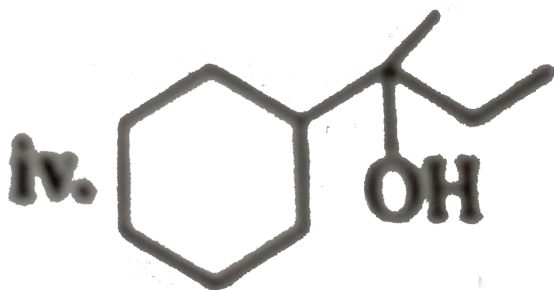


ii.



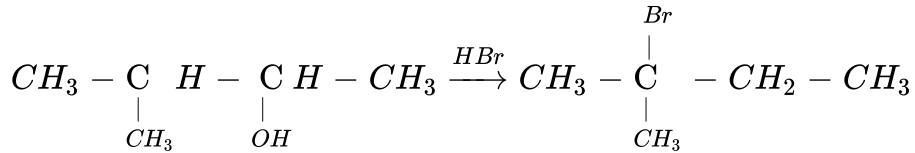
iii.

iv.



Watch Video Solution

45. When 3-methylbutan-2-ol is treated with HBr, the following reaction takes place:



Give a mechanism for this reaction.

(Hint : The secondary carbocation formed in step II rearranges to a more stable tertiary carbocation by a hydride ion shift from 3rd carbon atom.

 [Watch Video Solution](#)