

PHYSICS

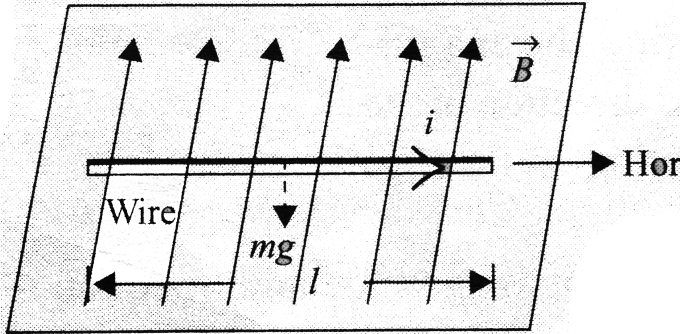
NCERT - NCERT PHYSICS(HINGLISH)

MOVING CHARGES AND MANGNETISM

Solved Examples

1. A straight wire of mass 200 g and length 1.5 m carries a current of 2 A. It is suspended in mid-air by a uniform horizontal magnetic field B.

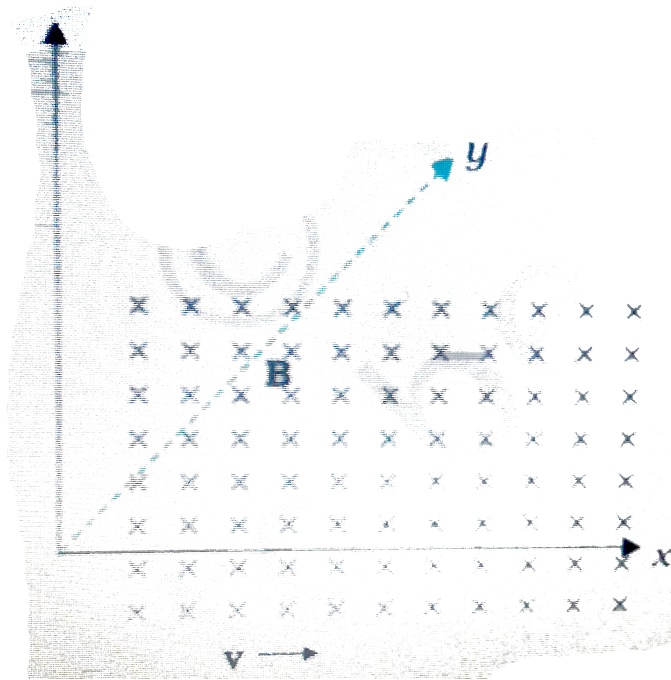
What is the magnitude of the magnetic field?



[Watch Video Solution](#)

2. If the magnetic field is parallel to the positive y-axis and the charged particle is moving along the positive x-axis (Fig.), which way would the Lorentz force be for (a) an electron (negative charge), (b) a proton

(positive charge).



[Watch Video Solution](#)

3. What is the radius of the path of an electron (mass 9×10^{-31} kg and charge $1.6 \times 10^{-19} C$) moving at a speed of $3 \times 10^7 m/s$ in a magnetic field of $6 \times 10^{-4} T$ perpendicular to it? What is its frequency? Calculate its energy in keV . ($1eV = 1.6 \times 10^{-19} J$).

[Watch Video Solution](#)

4. A cyclotron oscillator frequency is 10MHz . What should be the operating magnetic field for accelerating protons? If the radius of its dees is 60cm , what is the kinetic energy of the proton beam produced by the acceleration in MeV ?

$$(e = 1.6 \times 10^{-19}\text{C}, m_p = 1.67 \times 10^{-27}\text{kg}, 1\text{MeV} = 1.6 \times 10^{-13}\text{J})$$

 [Watch Video Solution](#)

5. An element $d\vec{l} = dx\hat{i}$ (where $dx = 1\text{cm}$) is placed at the origin and carries a large current $i = 10\text{A}$. What is the magnetic field on the Y-axis at a distance of 0.5m ?

 [Watch Video Solution](#)

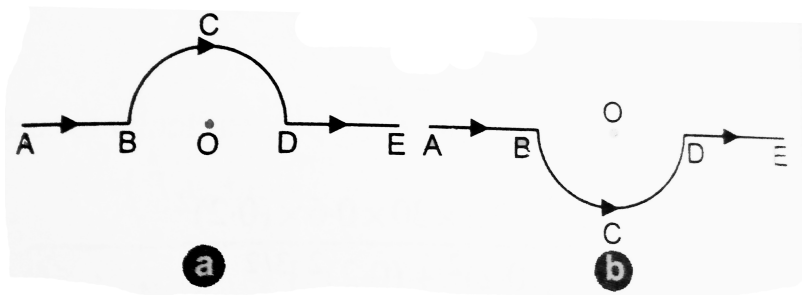
6. A straight wire carrying a current of 12A is bent into a semicircular arc of radius 2.0cm as shown in figure. Consider the magnetic field \vec{B} at the centre of arc.

(a) What is the magnetic field due to the straight segments?

(b) In what way the contribution to \vec{B} from the semicircle differs from that of a circular loop and in what way does it resemble?

(c) Would your answer be different if the wire were bent into a semicircle arc of the same radius but in the opposite way as shown in figure

figure

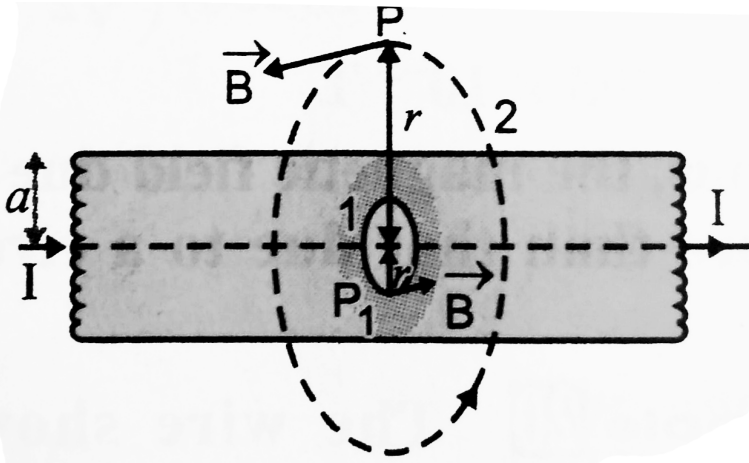


[Watch Video Solution](#)

7. A tightly wound 100 turn coil of radius 10cm is carrying a current of 1A . What is the magnitude of the magnetic field at the centre of the coil?

[Watch Video Solution](#)

8. Figure shows a long straight wire of circular crosssection (radius a) carrying steady current I . The current I is uniformly distributed across this crosssection. Calculate the magnetic field in the region $r < a$ and $r > a$.



[▶ Watch Video Solution](#)

9. A solenoid of length 0.5m has a radius of 1cm and is made up of 500 turns. It carries a current of 5A . What is the magnitude of the magnetic field inside the solenoid?

[▶ Watch Video Solution](#)

10. The horizontal component of the earth's magnetic field at a certain place is $3 \times 10^{-5} T$ and the direction of the field is from the geographic south to the geographic north. A very long straight conductor is carrying a steady current of 1 A. What is the force per unit length on it when it is placed on a horizontal table and the direction of the current is

(a) east to west,

(b) south to north?



[Watch Video Solution](#)

11. A 100 turn closely wound circular coil of radius 10cm carries a current of $3 \cdot 2\text{A}$. (i) What is the field at the centre of the coil? (ii) What is the magnetic moment of this arrangement? The coil is placed in a vertical plane and is free to rotate about a horizontal axis which coincides with its diameter. A uniform magnetic field of $2T$ in the horizontal direction exists such that initially the axis of the coil is in

the direction of the field. The coil rotates through an angle of 90° under the influence of the magnetic field. (iii) What are the magnitudes of the torques on the coil in the initial and final positions? (iv) What is the angular speed acquired by the coil when it has rotated by 90° ? The moment of inertia of the coil is 0.1 kgm^2 .

 [Watch Video Solution](#)

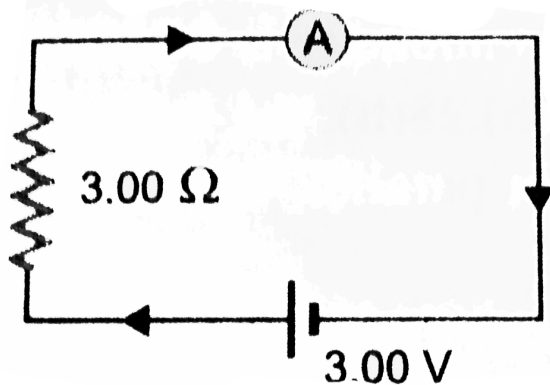
12. A current carrying circular loop is located in a uniform external magnetic field. If the loop is free to turn, what is its orientation of stable equilibrium? Show that in this orientation, the flux of the total field (external field + field produced by the loop) is maximum.

 [Watch Video Solution](#)

13. In the circuit shown in figure, the current is to be measured. What is the value of the current if the ammeter shown (i) is a galvanometer with a resistance $R_G = 60.00 \Omega$. (ii) is a galvanometer described in (i)

but converted to an ammeter by a shunt resistance $r_s = 0.02\Omega$, (iii)

is an ideal ammeter with zero resistance?



[Watch Video Solution](#)

Exercise

1. A circular coil of wire consisting of 100 turns, each of radius 8.0cm carries a current of 0.40A .

What is the magnitude of the magnetic field \vec{B} at the center of the coil?

[Watch Video Solution](#)

[Watch Video Solution](#)

2. A long straight wire carries a current of $35A$. What is the magnitude of the field \vec{B} at a point $20cm$ from the wire?

 [Watch Video Solution](#)

3. A long straight wire in the horizontal plane carries a current of $50A$ in north to south direction. Give the magnitude and direction of \vec{B} at a point $2.5m$ east of the wire.

 [Watch Video Solution](#)

4. A horizontal overhead power lines carries a current of $90 A$ in east to west direction. What is the magnitude and direction of the magnetic field due to the current $1.5m$ below the line?

 [Watch Video Solution](#)

5. What is the magnitude of the magnetic force per unit length on a wire carrying a current of 8 A making an angle of 30° with the direction of a uniform magnetic field of 0.15 T ?

 [Watch Video Solution](#)

6. A 3.0 cm wire carrying a current of 10 A is placed inside a solenoid perpendicular to its axis. The magnetic field inside the solenoid is given to be 0.27 T . What is the magnetic force on the wire?

 [Watch Video Solution](#)

7. Two long and parallel straight wires A and B carrying currents of 8.0 A and 5.0 A in the same direction are separated by a distance of 4.0 cm . Estimate the force on a 10 cm section of wire A.

 [Watch Video Solution](#)

8. A closely wound solenoid 80cm long has layers of windings of 400 turns each. The diameter of the solenoid is 1.8cm . If the current carried is 8.0A estimate the magnitude of \vec{B} inside the solenoid near its center.

 [Watch Video Solution](#)

9. A square coil of side 10cm consists of 20 turns and carries a current of 12A . The coil is suspended vertically and normal to the plane of the coil makes an angle of 30° with the direction of a uniform horizontal magnetic field of magnitude 0.80T . What is the magnitude of torque experienced by the coil?

 [Watch Video Solution](#)

10. Two moving coil meters M_1 and M_2 have the following particulars:

$$R_1 = 10\Omega, N_1 = 30, A_1 = 3 \cdot 6 \times 10^{-3}m^2, B_1 = 0 \cdot 25T,$$

$$R_2 = 14\Omega, N_2 = 42, A_2 = 1 \cdot 8 \times 10^{-3}m^2, B_2 = 0 \cdot 50T$$

(The spring constants are identical for the two metres). Determine the ratio of (a) current sensitivity and (b) voltage sensitivity of M_2 and M_1 .

 [Watch Video Solution](#)

11. In a chamber, a uniform magnetic field of $6 \cdot 5G$ ($1G = 10^{-4}T$) is maintained. An electron is shot into the field with a speed of $4 \cdot 8 \times 10^6ms^{-1}$ normal to the field. (i) Explain why the path of the electron is a circle. Determine the radius of the circular orbit. ($e = 1 \cdot 6 \times 10^{-19}C, m_e = 9 \cdot 1 \times 10^{-31}kg$).

 [Watch Video Solution](#)

12. If obtain the frequency of revolution of the electron in its circular orbit. Does the answer depend on the speed of the electron? Explain.

 [Watch Video Solution](#)

13. (a) A circular coil of 30 turns and radius 8.0cm . Carrying a current of 6.0A is suspended vertically in a uniform horizontal magnetic field of magnitude 1.0T . The field lines make an angle of 60° with the normal to the coil. Calculate the magnitude of the counter torque that must be applied to prevent the coil from turning.

(b) Would your answer change if the circular coil in (a) were replaced by a planar coil of some irregular shape that encloses the same area? (All other particulars are also unaltered).

 [Watch Video Solution](#)

14. Two Concentric circular coils X and Y of radii 16cm and 10cm lie in the same vertical plane containing $N - S$ direction X has 20 turns and carries 16A . Y has 25 turns & carries 18A . X has current in anticlockwise direction and Y has current in clockwise direction for the observer, looking at the coils facing the west. The magnitude of net magnetic field at their common center is?

 [Watch Video Solution](#)

15. A magnetic field of 100G ($1\text{G} = 10^{-4}\text{T}$) is required which is uniform in a region of linear dimension about 10cm and area of cross-section about 10^{-3}m^2 . The maximum current carrying capacity of a given coil of wire is 15A and the number of turns per unit length that can be wound round a core is at most 1000turnsm^{-1} . Suggest some appropriate design particulars of a solenoid for the required purpose. Assume the core is not ferromagnetic.

 [Watch Video Solution](#)

16. For a circular coil of radius R and N turns carrying current I , the magnitude of the magnetic field at a point on its axis at a distance x from its center is given by $B = \frac{\mu_0 I R^2 N}{2(x^2 + R^2)^{3/2}}$

(a) Show that this reduces to the familiar result for field at the centre of the coil.

(b) Consider two parallel coaxial circular coils of equal radius R , and number of turns N , carrying equal currents in the same direction, and separated by a distance R . Show that the field on the axis around the mid-point between the coils is uniform over a distance that is small as compared to R and is given by $B = 0.72 \frac{\mu_0 N I}{R}$ approximately.

[Such an arrangement to produce a nearly uniform magnetic field over a small region is known as Helmholtz coils.]



[Watch Video Solution](#)

17. A toroid has a core (non ferromagnetic material) of inner radius 25cm and outer radius 26cm around which 3500 turns of wire are wound. If the current in the wire is 11A , what is the magnetic field (a) outside the toroid (b) inside the core of the toroid (c) in the empty space surrounded by the toroid?



[Watch Video Solution](#)

18. Answer the following questions:

(a) A magnetic field that varies in magnitude from point but has a constant direction (east to west) is set up in a chamber. A charged particle enters the chamber and travels undeflected along a straight path with constant speed. What can you say about the initial velocity of the particle?

(b) A charged particle enters an environment of a strong and non-uniform magnetic field varying from point to point both in magnitude and direction, and comes out of it following a complicated trajectory.

Would its final speed equal the initial speed if it suffered no collisions with the environment?

(c) An electron travelling west to east enters a chamber having a uniform electrostatic field in north to south direction. Specify the direction in which a uniform magnetic field should be set up to prevent the electron from deflecting from its straight line path.

 [Watch Video Solution](#)

19. An electron emitted by a heated cathode and accelerated through a potential difference of 2.0 kV enters a region with a uniform magnetic field of 0.15 T . Determine the trajectory of the electron if the field (a) is transverse to its initial velocity (b) makes an angle of 30° with the initial velocity.

 [Watch Video Solution](#)

20. A magnetic field set up using Helmholtz coils (described in Question 16 above) is uniform in a small region and has a magnitude of $0.75T$. In the same region, a uniform electrostatic field is maintained in a direction normal to the common axis of the coils. A narrow beam of (single species) charged particles all accelerated through $15kV$ enters this region in a direction perpendicular to both the axis of the coils and the electrostatic field. If the beam remains undeflected when the electrostatic field is $9 \times 10^{-5}Vm^{-1}$, make a simple guess so to what the beam contains. Why is the answer not unique?



[Watch Video Solution](#)

21. A straight horizontal conducting rod of length $0.45m$ and mass $60g$ is suspended by two vertical wires at its end. A current of $5.0A$ is set up in the rod through the wires. (a) What magnetic field should be set up normal to the conductor in order that the tension in the wires

is zero? (b) What will be the total tension in the wires if the direction of current is reversed, keeping the magnetic field same as before. (Ignore the mass of the wire) $g = 9.8 \text{ms}^{-2}$.

 [Watch Video Solution](#)

22. The wires which connect the battery of an automobile to its starting motor carry a current of 300A (for a short time). What is the force per unit length between the wires if they are 70cm long and 1.5cm apart? Is the force attractive or repulsive?

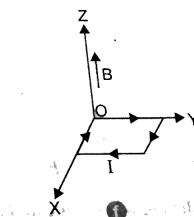
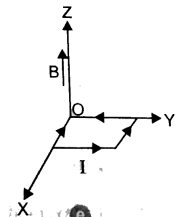
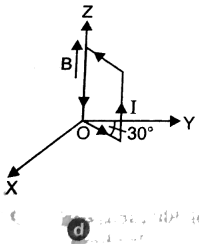
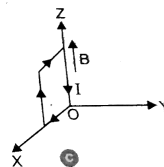
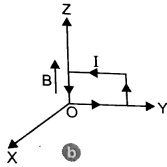
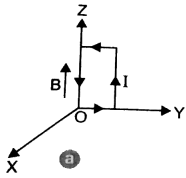
 [Watch Video Solution](#)

23. A uniform magnetic field of 1.5T is in cylindrical region of radius 10.0cm with its direction parallel to the axis along east to west. A wire carrying current of 7.0A in the north to south direction passes through this region. What is the magnitude and direction of the force on the wire if (a) the wire intersects the axes, (b) the wire is turned

from N-S to north east-south west direction, (c) the wire in the N-S direction is lowered from the axis by a distance 6.0cm ?

[▶ Watch Video Solution](#)

24. A uniform magnetic field of 3000G is established along the positive z-direction. A rectangular loop of sides 10cm and 5cm carries a current 12A . What is the torque on the loop in the different cases shown in the figure. What is the force on each case? Which case corresponds to stable equilibrium?



[▶ Watch Video Solution](#)

25. A circular coil of 20 turns and radius 10cm is placed in a uniform magnetic field of 0.10T normal to the place of the coil. If the current in the coil is 5.0A , what is the

(a) total torque on the coil,

(b) total force on the coil,

(c) Given, $N = 10^{29}\text{m}^{-3}$, $A = 10^{-5}\text{m}^2$

Force on an electron of charge e , moving with drift velocity v_d in the magnetic field is given by

$$F = Bev_d = Be \frac{I}{NeA} (\because I = NeAv_d)$$

$$F = \frac{BI}{NA} = \frac{0 \cdot 10 \times 5 \cdot 0}{10^{29} \times 10^{-5}} = 5 \times 10^{-25}\text{N}$$

 [Watch Video Solution](#)

26. A solenoid 60cm long and of radius 4cm has 3 layer of windings 300 turns each. A 2.3cm long wire of mass 2.5g lies inside the solenoid near its center normal to its axis, both the wire and the axis of the solenoid are in the horizontal plane. The wire is connected

through two leads parallel to the axis of the solenoid to an external battery which supplies a current of $6A$ in the wire. What value of current (with appropriate sense of circulation) in the windings of the solenoid can support the weight of the wire?

 [Watch Video Solution](#)

27. A galvanometer coil has a resistance of 12Ω and the meter shows full scale deflection for a current of $3mA$. How will you convert the meter into a voltmeter of range 0 to $18V$?

 [Watch Video Solution](#)

28. A galvanometer coil has a resistance of 15Ω and the meter shows full scale deflection for a current of $4mA$. How will you convert the meter into an ammeter of range 0 to $6A$?

 [Watch Video Solution](#)

