



PHYSICS

NCERT - NCERT PHYSICS(ENGLISH)

ELECTROSTATIC POTENTIAL AND CAPACITANCE

Solved Examples

1. (a) Calculate the potential at a point P due to a charge of $4 \times 10^{-7} C$ located 9 cm away.

(b) Hence obtain the work done in bringing a charge of $2 \times 10^{-9}C$ from infinity to the point P. Does the answer depend on the path along which the charge is brought ?

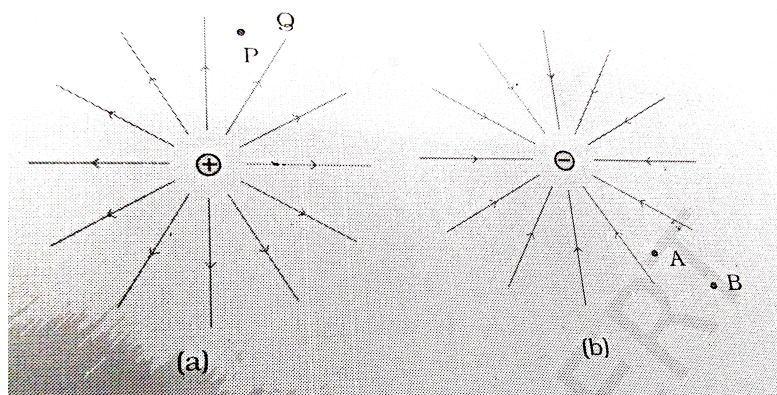


Watch Video Solution

2. Two charges $3 \times 10^{-8}C$ and $-2 \times 10^{-8}C$ are located 15 cm apart. At what point on the line joining the two charges is the electric potential zero ? Take the potential at infinity to be zero.



3. Figures (a) and (b) show the field lines of a positive and negative point charge respectively.



(a) Give the signs of the potential difference

$$V_P - V_Q, V_B - V_A.$$

(b) Give the sign of the potential energy

difference of a small negative charge between the points Q and P, A and B.

(c) Give the sign of the work done by the field in moving a small positive charge from Q to P.

(d) Give the sign of the work done by the external agency in moving a small negative charge from B to A.

(e) Does the kinetic energy of a small negative charge increase or decrease in going from B to A?



Watch Video Solution

4. Three particles each of mass m are placed at the three corners of an equilateral triangle of side a . The work which should be done to increase the sides of the triangle to $2a$ is



Watch Video Solution

5. (a) Determine the electrostatic potential energy of a system consisting of two charge $7\mu C$ and $-2\mu C$ (and with no external field) placed at $(-9cm, 0, 0)$ and $(9cm, 0, 0)$ respectively.

(b) How much work is required to separate the two charges infinitely away from each other ?

(c) Suppose that the same system of charges is now placed in an external electric field $E = A \times 1/r^2$, where $A = 9 \times 10^5 \text{ Cm}^{-2}$.

What would the electrostatic energy of the configuration be ?



Watch Video Solution

6. A molecule of a substance has a permanent electric dipole moment of magnitude 10^{-29} C

m. A mole of this substance is polarized at low temperature by applying a strong electrostatic field of magnitude 10^6 V m^{-1} . The direction of the field is suddenly changed by an angle of 60° . Estimate the heat released by the substance in aligning its dipole along the new direction of the field. For simplicity, assume 100 % polarisation of sample.



View Text Solution

7. (a) A comb run through one's dry hair attracts small bits of paper. Why? What happens if the hair is wet or if it is a rainy day? (Remember, a paper does not conduct electricity.)

(b) Ordinary rubber is an insulator. But special rubber tyres of aircraft are made slightly conducting. Why is this necessary?

(c) Vehicles carrying inflammable materials usually have metallic ropes touching the ground during motion. Why?

(d) A bird perches on a bare high power line,

and nothing happens to the bird. A man standing on the ground touches the same line and gets a fatal shock. Why?



View Text Solution

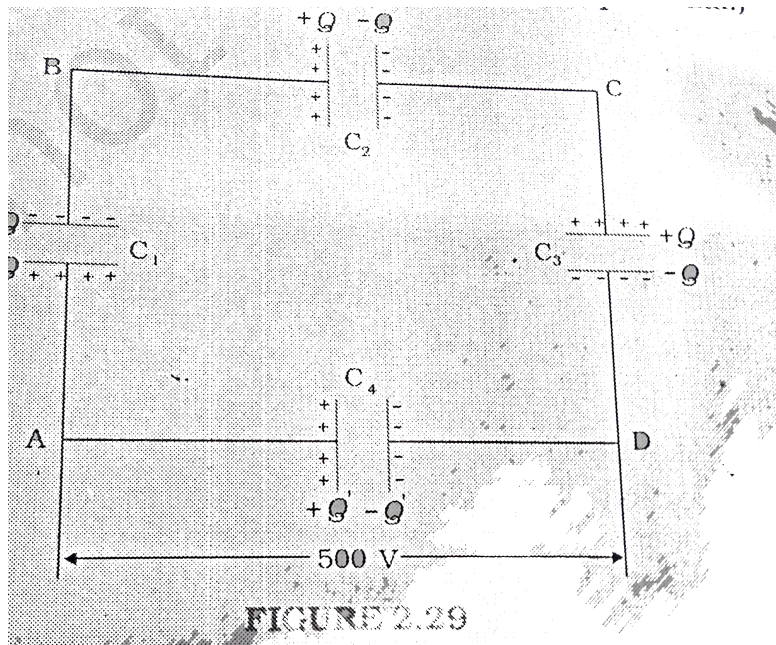
8. A slab of material of dielectric constant K has the same area as the plates of a parallel capacitor, but has a thickness $\left(\frac{3}{4}d\right)$, where d is the separation of the plates. How is the capacitance changed when the slab is inserted between the plates



Watch Video Solution

9. A network of four $10\mu F$ capacitors is connected to a 500 V supply, as shown in Fig. Determine (a) the equivalent capacitance of the network and (b) the charge on each capacitor. (Note, the charge on a capacitor is the charge on the plate with higher potential, equal and opposite to the charge on the plate

with lower potential.)



Watch Video Solution

10. A 900 pF capacitor is charged by 100V battery.

(a) How much electrostatic energy is stored

by the capacitor ? The capacitor is disconnected from the battery and connected to another 900 pF capacitor. How much is the electrostatic energy stored in the system ?



Watch Video Solution

Exercise

1. Two charges $5 \times 10^{-8}C$ and $-3 \times 10^{-8}C$ are located 16 cm apart. At what points on the line joining the two charges is the electric

potential zero ? Take the potential at infinity to be zero.



Watch Video Solution

2. A regular hexagon of side 10 cm has a charge $5\mu C$ at each of its vertices. Calculate the potential at the center of the hexagon.



Watch Video Solution

3. Two charges $+2\mu C$ and $-2\mu C$ are placed at points A and B, 6 cm apart (a) Identify an equipotential surface of the system. (b) What is the direction of the electric field at every point on this surface ?



View Text Solution

4. A spherical conductor of radius 12 cm has a charge of $1.6 \times 10^{-7} C$ distributed uniformly on its surface. What is the electric field (a)

inside the sphere (b) just outside the sphere (c)
) at a point 18 cm from the center of the
sphere ?



Watch Video Solution

5. A parallel plate capacitor with air between the plates has a capacitance of 8 pF. ($1\text{pF} = 10^{-12}\text{F}$) What will be the capacitance if the distance between the plates is reduced by half and the space between

them is filled with a substance of dielectric constant ϵ ?



Watch Video Solution

6. Three capacitors each of capacitance 9 pF are connected in series. What is the total capacitance of the combination ?



Watch Video Solution

7. Three capacitors of capacitance $2\mu F$, $3\mu F$ and $4\mu F$ are connected in parallel.

(a) what is the total capacitance of the combination ? (b) Determine the charge on each capacitor, If the combination is connected to 100V supply.



Watch Video Solution

8. In a parallel plate capacitor with air between the plates, each plate has an area of

$6 \times 10^{-3} m^2$ and distance between the plates is 3mm. Calculate the capacitance. If this capacitance is connected to a 100V supply, what is the charge on each plate of the capacitor ?



Watch Video Solution

9. Explain what would happen if a 3 mm thick mica sheet of (dielectric constant = 6) were inserted between the plates (a) while the

voltage supply remained connected (b) after the supply was disconnected.



View Text Solution

10. A 12 pF capacitor is connected to a 50 V battery. How much electrostatic energy is stored in the capacitor ?



Watch Video Solution

11. A 600pF capacitor is charged by a 200V supply. It is then disconnected from the supply and is connected to another uncharged 600pF capacitor. What is the common potential in V and energy lost in J after reconnection?



Watch Video Solution

12. A charge of 8 mC is located at the origin. Calculate the work done in taking a small charge of -2×10^{-9} from a point $P(0, 0, 3\text{cm})$

to a point $Q(0, 4\text{cm}, 0)$ via a point $R(0, 6\text{cm}, 9\text{cm})$.



Watch Video Solution

13. A cube of side b has a charge q at each of its vertices. Determine the potential and electric field due to this charge array at the center of the cube.



Watch Video Solution

14. Two tiny spheres carrying charges $1.5\mu C$ and $2.5\mu C$ are located 30 cm apart. Find the potential

(a) at the mid-point of the line joining the two charges and

(b). At a point 10 cm from this mid-point in a plane normal to the line and passing through the mid-point.



Watch Video Solution

15. A spherical conducting shell of inner radius r_1 and outer radius r_2 has a charge Q .

(a) A charge q is placed at the center of the shell. What is the surface charge density on the inner and outer surfaces of the shell ?

(b) Is the electric field intensity inside a cavity (with no charge) zero, even if the shell is not spherical, but has any irregular shape ?

Explain.



View Text Solution

16. (a) Show that the normal component of electrostatic field has a discontinuity from one side of a charged surface to another given by $(E_2 - E_1)\hat{n} = \frac{\sigma}{\epsilon_0}$ where \hat{n} is a unit vector normal to the surface at a point and σ is the surface charge density at that point. (The direction of \hat{n} is from side 1 to side 2.) Hence show that just outside a conductor, the electric field is $\frac{\sigma}{\epsilon_0}\hat{n}$. (b) Show that the tangential component of electrostatic field is continuous from one side of a charged surface to another. [Hint: For (a), use Gauss's law. For,

(b) use the fact that work done by electrostatic field on a closed loop is zero.]



View Text Solution

17. A long charged cylinder of linear charge density λ is surrounded by a hollow co-axial conducting cylinder. What is the electric field in the space between the two cylinders ?



Watch Video Solution

18. In a hydrogen atom, the electron and proton are bound at a distance of about 0.53 \AA :

(a) Estimate the potential energy of the system in eV, taking the zero of the potential energy at infinite separation of the electron from proton.

(b) What is the minimum work required to free the electron, given that its kinetic energy in the orbit is half the magnitude of potential energy obtained in (a)?

(c) What are the answers to (a) and (b) above

if the zero of potential energy is taken at 1.06 \AA separation?



View Text Solution

19. If one of the two electrons of a hydrogen molecule is removed, we get a hydrogen molecule ion (H_2^+). In the ground state of H_2^+ , the two protons are separated roughly by 1.5 \AA and electron is roughly 1 \AA from each proton. Determine the potential energy of the

system. Specify your choice of zero of potential energy.



Watch Video Solution

20. Two charged conducting spheres of radii a and b are connected to each other by a wire. What is the ratio of electric fields at the surface of two spheres ? Use the result obtained to explain why charge density on the sharp and pointed ends of a conductor is higher than on its fatter portions ?



21. Two charges $-q$ and $+q$ are located at points $(0, 0, -a)$ and $(0, 0, a)$, respectively.

(a) What is the electrostatic potential at the points $(0, 0, z)$ and $(x, y, 0)$? (b) Obtain the dependence of potential on the distance r of a point from the origin when $r/a > 1$.

(c) How much work is done in moving a small test charge from the point $(5,0,0)$ to $(-7,0,0)$ along the x -axis? Does the answer change if

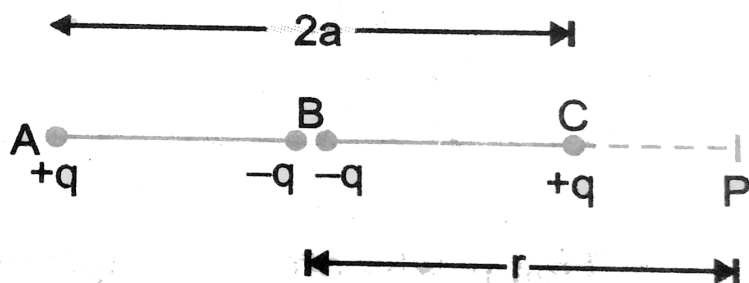
the path of the test charge between the same points is not along the x-axis?



View Text Solution

22. Fig shows a charge array known as an 'electric quadrupole'. For a point on the axis of the quadrupole, obtain the dependence of potential on r for $r/a \gg 1$, and contract your results with that due to an electric dipole

and an electric monopole (i.e, a single charge).



Watch Video Solution

23. An electrical technician requires a capacitance of $2\mu F$ in a circuit across a potential difference of 1 kV. A large number of $1\mu F$ capacitors are available to him each of which can withstand a potential difference of

not more than 400 V. Suggest a possible arrangement that requires the minimum number of capacitors.



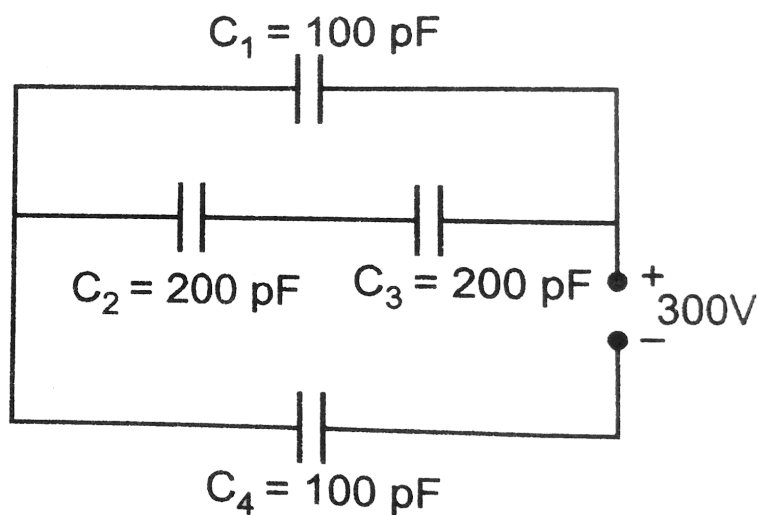
Watch Video Solution

24. What is the area of the plates of a 2 farad parallel plate air capacitor, given that the separation between the plates is 0.5 cm?



Watch Video Solution

25. Obtain equivalent capacitance of the following network, Fig. For a 300V supply determine the charge and voltage across each capacitor.



Watch Video Solution

26. The plates of a parallel plate capacitor have an area of 90cm^2 each and are separated by 2.5mm. The capacitance is charged by connecting it to a 400V supply.

(a) How much electrostatic energy is stored by the capacitor ?

(b) View this energy as stored in the electrostatic field between the plates, and obtain the energy per unit volume (u). Hence arrive at a relation between U and the magnitude of electric field E between the plates.



[Watch Video Solution](#)

27. A $4\mu F$ capacitor is charged by a 200 V supply. It is then disconnected from the supply and is connected to another uncharged $2\mu F$ capacitor. How much electrostatic energy of the first capacitor is dissipated in the form of heat and electromagnetic radiation ?



[Watch Video Solution](#)

28. Show that the force on each plate of a parallel plate capacitor has a magnitude equal to $(\frac{1}{2})QE$, where Q is the charge on the capacitor, and E is the magnitude of electric field between the plates. Explain the origin of the factor $\frac{1}{2}$.



Watch Video Solution

29. A spherical capacitor consists of two concentric spherical conductors, held in

position by suitable insulating supports. Show that the capacitance of this spherical capacitor is given by $C = \frac{4\pi \epsilon_0 r_1 r_2}{r_1 - r_2}$,

Where r_1 and r_2 are radial of outer and inner spheres respectively.



Watch Video Solution

30. A spherical capacitor has an inner sphere of radius 12 cm and an outer sphere of radius 13 cm. The outer sphere is earthed and the inner sphere is given a charge of $2.5\mu C$. The

space between the concentric spheres is filled with a liquid of dielectric constant 32.

(a) Determine the capacitance of the capacitor.

(b) What is the potential of the inner sphere ?

(c) Compare the capacitance of this capacitor with that of an isolated sphere of radius 12 cm. Explain why the later is much smaller ?



Watch Video Solution

31. Answer carefully:

(a) Two large conducting spheres carrying

charges Q_1 and Q_2 are brought close to each other. Is the magnitude of electrostatic force between them exactly given by $Q_1 Q_2 / 4\pi\epsilon_0 r^2$, where r is the distance between their centers?

(b) If Coulomb's law involved $1/r^3$ dependence (instead of $1/r^2$), would Gauss's law be still true ?

(c) A small test charge is released at rest at a point in an electrostatic field configuration. Will it travel along the field line passing through that point?

(d) What is the work done by the field of a nucleus in a complete circular orbit of the

electron? What if the orbit is elliptical?

(e) We know that electric field is discontinuous across the surface of a charged conductor. Is electric potential also discontinuous there?

(f) What meaning would you give to the capacitance of a single conductor?

(g) Guess a possible reason why water has a much greater dielectric constant ($= 80$) than say, mica ($= 6$).



View Text Solution

32. A cylindrical capacitor has two co-axial cylinders of length 15 cm and radial 1.5 and 1.4 cm. The outer cylinder is earthed and inner cylinder is given a charge of $3.5\mu C$. Determine the capacitance of the system and the potential of the inner cylinder. Neglect end effects (i.e., bending of field lines at the ends.)



Watch Video Solution

33. A parallel plate capacitor is to be designed with a voltage rating 1 KV using a material of dielectric constant 3 and dielectric strength about $10^7 Vm^{-1}$. [Dielectric strength is the maximum electric field a material can tolerate without break down, i.e, without starting to conduct electrically through partial ionization. For safety, we should like the field never to exceed say 10 % of the dielectric strength]. What minimum area of the plates is required to have a capacitance of 50 pF ?



Watch Video Solution

34. Describe schematically the equipotential surfaces corresponding to

(a) a constant electric field in the z -direction,

(b) a field that uniformly increases in magnitude but remains in a constant (say, z) direction,

(c) a single positive charge at the origin, and

(d) a uniform grid consisting of long equally spaced parallel charged wires in a plane.



View Text Solution

35. In a Van de graaf type generator a spherical metal shell is to be a 15×10^6 volt electrode. The dielectric strength of the gas surrounding the electrode is $5 \times 10^7 Vm^{-1}$.

What is the minimum radius of the spherical shell required ?

[you will learn from this exercise why one cannot build an electrostatic generator using a very small shell, which requires a small charge to acquire a high potential.]



View Text Solution

36. A small sphere of radius r_1 and charge q_1 is enclosed by a spherical shell of radius r_2 and charge q_2 . Show that if q_1 is positive, charge will necessarily flow from the sphere to the shell (when the two are connected by a wire) no matter what the charge q_2 on the shell is [Fig]



Watch Video Solution

37. Answer the following:

(a) The top of the atmosphere is at about 400 kV with respect to the surface of the earth, corresponding to an electric field that decreases with altitude. Near the surface of the earth, the field is about 100Vm^{-1} . Why then do we not get an electric shock as we step out of our house into the open? (Assume the house to be a steel cage so there is no field inside!)

(b) A man fixes outside his house one evening a two metre high insulating slab carrying on

its top a large aluminium sheet of area $1m^2$.

Will he get an electric shock if he touches the metal sheet next morning?

(c) The discharging current in the atmosphere due to the small conductivity of air is known to be 1800 A on an average over the globe. Why then does the atmosphere not discharge itself completely in due course and become electrically neutral? In other words, what keeps the atmosphere charged?

(d) What are the forms of energy into which the electrical energy of the atmosphere is dissipated during a lightning? (Hint: The earth

has an electric field of about $100V\,m^{-1}$ at its surface in the downward direction, corresponding to a surface charge density $= 10^{-9}C\,m^{-2}$. Due to the slight conductivity of the atmosphere up to about 50 km (beyond which it is good conductor), about $+1800C$ is pumped every second into the earth as a whole. The earth, however, does not get discharged since thunderstorms and lightning occurring continually all over the globe pump an equal amount of negative charge on the earth.)



[View Text Solution](#)

[view text solution](#)