



MATHS

BOOKS - RD SHARMA MATHS

(HINGLISH)

DATA HANDLING-III (PIE CHARTS OR CIRCLE GRAPHS)

[All Questions](#)

1. The number of students in a hostel, speaking different languages is given below.

Display the data in a pie chart.

Language	Hindi	English	Marathi	Tamil	Bengali	Total
Number of students	40	12	9	7	4	72



[Watch Video Solution](#)

2. In the month of July 2004, a house holder spent his monthly salary amounting to Rs. 7200 on different items as given below: Items, Clothing, Food, House Rent, Education, Misc.

Amount spent (in Rs.), 600, 4000, 1200, 400, 1000 Represent the information in the form of a pie-chart.



[Watch Video Solution](#)

3. The number of students admitted in different faculties of a college are given below:

Faculty	Science	Art	Commerce	Law	Edu.,
Total No. of Student	1000	1200	650	450	300

3600 Draw a pie-chart to represent the above information.



[Watch Video Solution](#)

4. Draw a pie-diagram to represent the following data on the proposed outlay during the fourth five-year plan. Items, Agriculture, Ind. and Minerals, Irrigation & Power, Communication, Miscellaneous Rupees (in crores), 6000, 4000, 2500, 4500, 3000



[Watch Video Solution](#)

5. The following data relates to the cost of construction of a house in Delhi. Items, Cement, Steel, Bricks, Timber, Labour, Misc. Expenditure, 30%, 10%, 10%, 15%, 25%, 10% Draw a pie-diagram to represent the above data.



[Watch Video Solution](#)

6. Draw a pie-diagram for the following data of expenditure pattern in a family: Items, Food,

Clothing, Rent, Edu, Misc. Expenditure (in Rs)

4000, 2000, 1500, 1500, 1000



[Watch Video Solution](#)

7. The following data shows the number of students opting different subject in a college:

Subjects, English, Maths, Physics, Chemistry,

Eco., Commerce No. of Students, 45, 60, 20, 30,

10, 15 Construct a pie-diagram to represent

the above data.



[Watch Video Solution](#)

8. The number of hours, spent by a school boy on different activities in a working day, is given below: Activities, Sleep, School, Home, Play, others, Total No. Of hours, 8, 7, 4, 2, 3, 24 Present the information in the form of a pie-chart.



Watch Video Solution

9. Employees of a company have been categorized according to their religions as

given below: Religions, Hindu, Muslim, Sikh, Christian, Total No. of workers, 420, 300, 225, 105, 1080 Draw a pie-chart to represent the above information.



[Watch Video Solution](#)

10. In one day the sales (in rupees) of different items of a baker's shop are given below: Items, Ordinary bread, Fruit bread, Cakes and Pastries, Biscuits, Other, Total Sales (in Rs.),

260, 40, 100, 60, 20, 480 Draw a pie-chart representing the above sales.



[Watch Video Solution](#)

11. The following data shows the expenditure of a person on different items during a month. Represent the data by a pie-chart. Items of expenditure, Rent, Education, Food, Clothing, Others Amount (in Rs.), 2700, 1800, 2400, 1500, 2400



[Watch Video Solution](#)

12. The percentages of various categories of workers in a state are given in the following table. Categories, Cultivators, Agricultural Labourers, Industrial Workers, Commercial Workers, Others % of workers, 40, 25, 12.5, 10, 12.5 Present the information in the form a pie-chart.



Watch Video Solution

13. The following table shows the expenditure incurred by a publisher in publishing a book:

Items,	Paper,	Printing,	Binding,	Advertising,	Misc. Expenditure (in %),
	35%,	20%,	10%,	5%,	30%

Present the above data in the form of a pie-chart.



Watch Video Solution

14. Percentage of the different products of a village in a particular district are given below.

Draw a pie chart representing this information. Items, Wheat, Pulses, Jwar, Grounnuts, Vegetables, Total %, $\frac{125}{3}$, $\frac{125}{6}$, $\frac{25}{2}$, $\frac{50}{3}$, $\frac{50}{3}$, 100



[Watch Video Solution](#)

15. Draw a pie-diagram for the following data of expenditure pattern in a family: Items, Food, Clothing, Rent, Education, Unforessen events, Midicine Expenditure (in percent), 40%, 20%, 10%, 10%, 15%, 5%



[Watch Video Solution](#)

16. Draw a pie-diagram of the area of continents of the world given in the following table: Continents, Asia, U.S.S.R., Africa, Europe, North America, South America, Australia Area (in million sq. km), 26.9, 20.5, 30.3, 4.9, 24.3, 17.9, 8.5



[Watch Video Solution](#)

17. The following data gives the amount spent on the construction of a house. Draw a pie diagram. Items, Cement, Timber, Bricks, Labour, Steel, Misc. Expenditure (in thousand Rs), 60, 30, 45, 75, 45, 45



Watch Video Solution

18. The following table shows how a student spends his pocket money during the course of a month. Represent it by a pie-diagram. Items,

Food, Entertainment, Other expenditure,
Savings Expenditure, 40%, 25%, 20%, 15%



[Watch Video Solution](#)

19. Following data gives the break up of the cost of production of a book: Printing

Paper

Binding charges

Advertisement

Royalty Misc.

30%

15%

15%

20%

10%

15% Draw a pie-diagram

depicting the above information.



[Watch Video Solution](#)

20. Represent the following data with the help of a pie-diagram: Items, Wheat, Rice, Tea Production (in metric tons), 3280, 1840, 900



[Watch Video Solution](#)

21. Draw a pie-diagram representing the relative frequencies (expressed as percentage) of the eight classes as given below: 12.6, 18.2, 17.5, 20.3, 2.8, 4.2, 9.8, 14.7



[Watch Video Solution](#)

22. Following is the break up of the expenditure of a family on different items of consumption.: Items, Food, Clothing, Rent, Education, Fuel etc., Medicine, Misc. Expenditure (in Rs), 1600, 200, 600, 150, 100, 80, 270 Draw a pie-diagram to represent the above data.



[Watch Video Solution](#)

23. Draw a pie-diagram for the following data of the investment pattern in a five year plan: Agriculture , Irrigation and Power, Small Industries, Transport, Social service, Misc. 14%, 16%, 29%, 17%, 16%, 8%

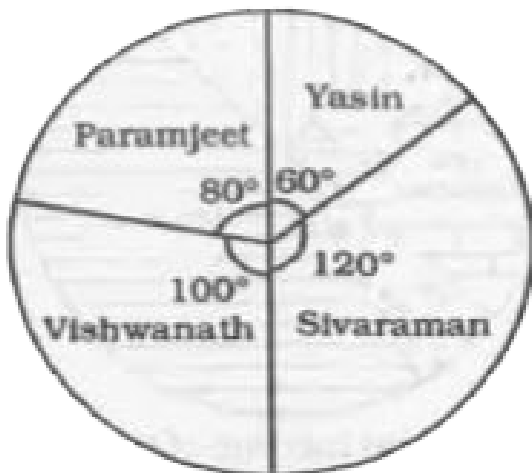


Watch Video Solution

24. The pie chart, given here, represents the number of valid votes obtained by four students who contested election for school leadership. The total number of valid votes

polled was 720.

Observe the chart and answer the questions based on it.

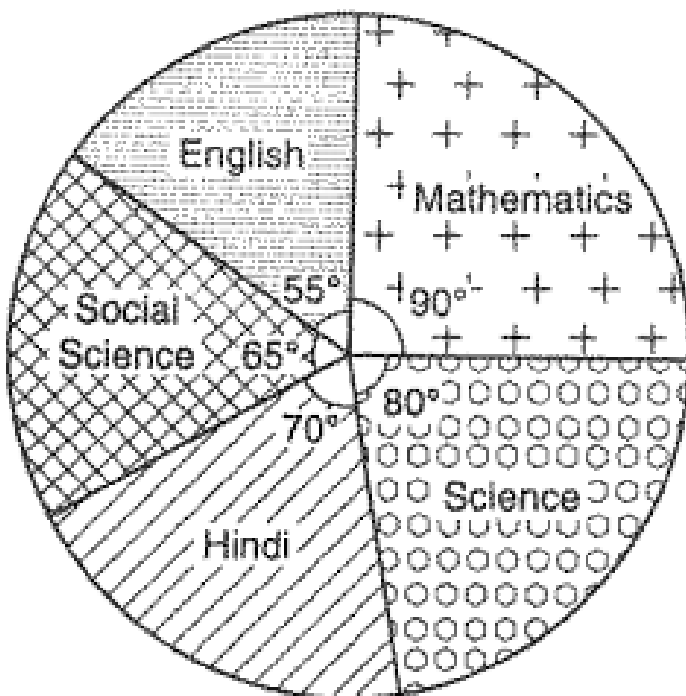


Who was the winner ?



[Watch Video Solution](#)

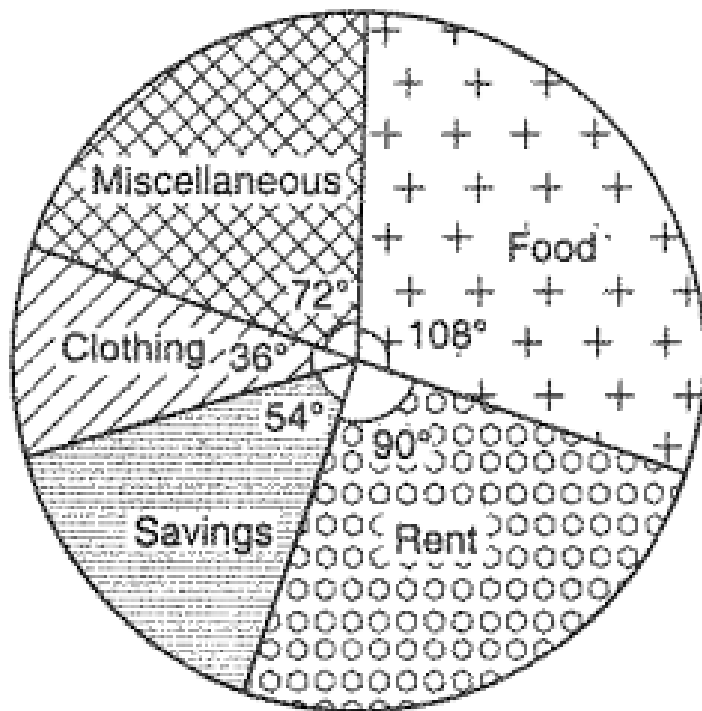
25. The following pie-chart gives the marks scored in an examination by a student in various subjects. If the total marks obtained by the student were 540, answer the following questions





26. The following pie-chart shows the monthly expenditure of a family on food, clothing, rent, miscellaneous expenses and savings. If the family spends Rs. 825 on clothing, answer the following questions: What is the total monthly income of the family? What percent of the

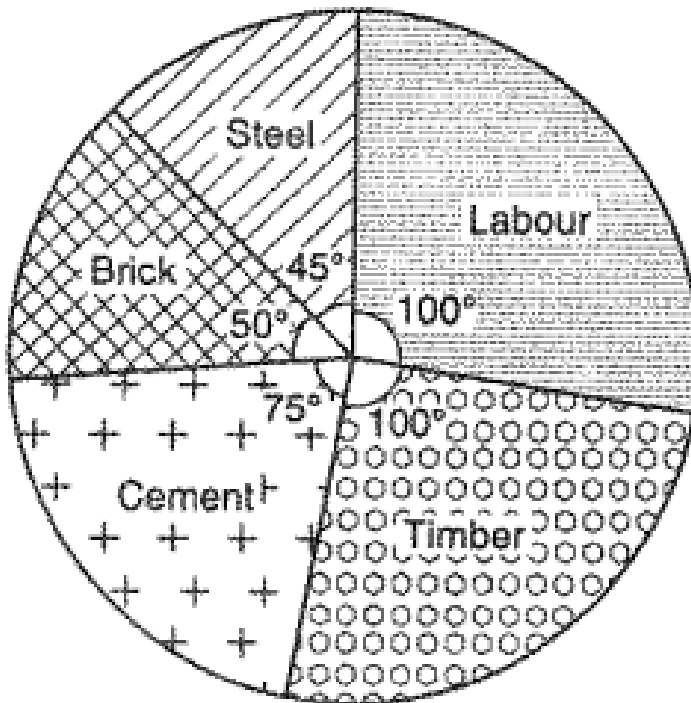
total income does the family save?



[Watch Video Solution](#)

27. The pie-chart given in Figure represents the expenditure on different items in

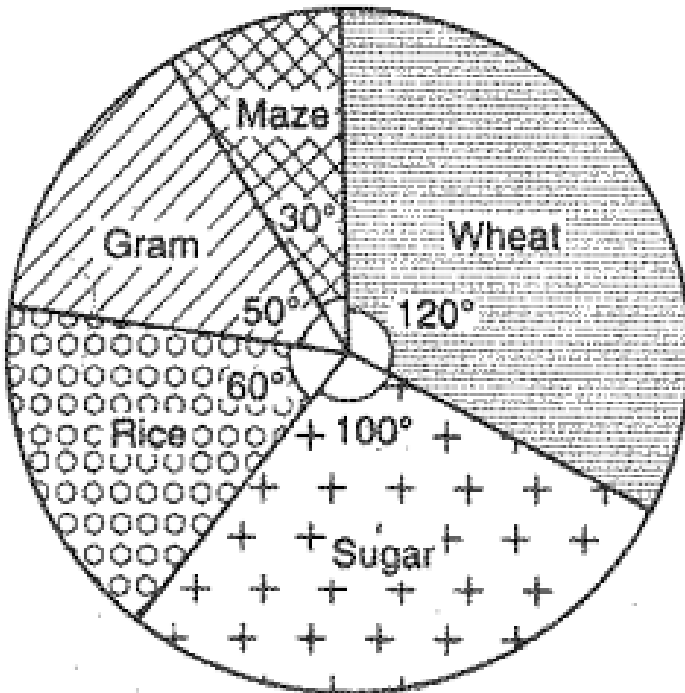
constructing a flat in Delhi. If the expenditure incurred on cement is Rs. 112500. Find the following Total cost of the flat Expenditure incurred on labour.



[Watch Video Solution](#)

28. The pie-chart given in Figure shows the annual agricultural production of an Indian state. If the total production of all the commodities is 81000 tonnes, find the production (in tonnes) of Wheat (ii) Sugar

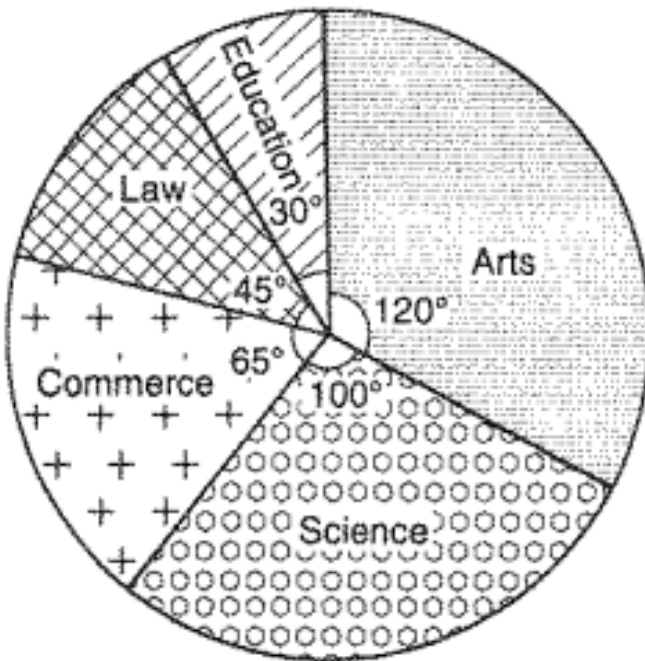
(iii) Rice (iv) Maize (v) Gram



[Watch Video Solution](#)

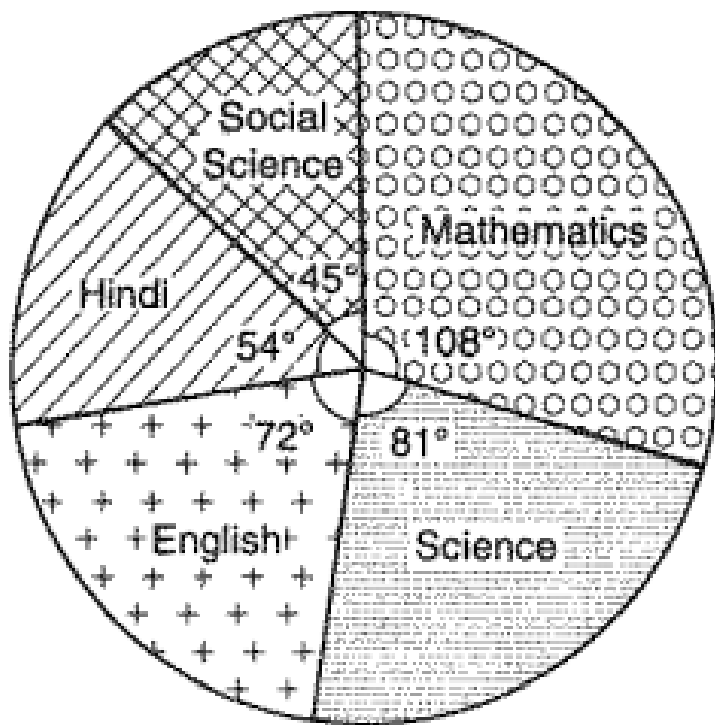
29. The following pie-chart shows the number of students admitted in different faculties of a

college. If 1000 students are admitted in Science answer the following: What is the total number of students? What is the ratio of students in science and arts?



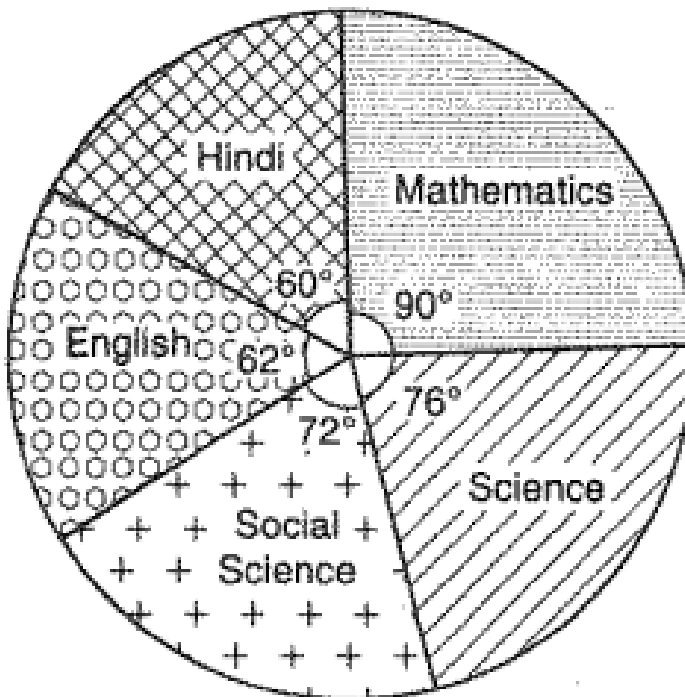
 [Watch Video Solution](#)

30. In Figure, the pie-chart shows the marks obtained by a student in an examination. If the student secures 440 marks in all, calculate his marks in each of the given subjects.



Watch Video Solution

31. In Figure, the pie-chart shows the marks obtained by a student in various subjects. If the student scored 135 marks in mathematics, find the total marks in all the subject. Also, find his score in individual subjects.

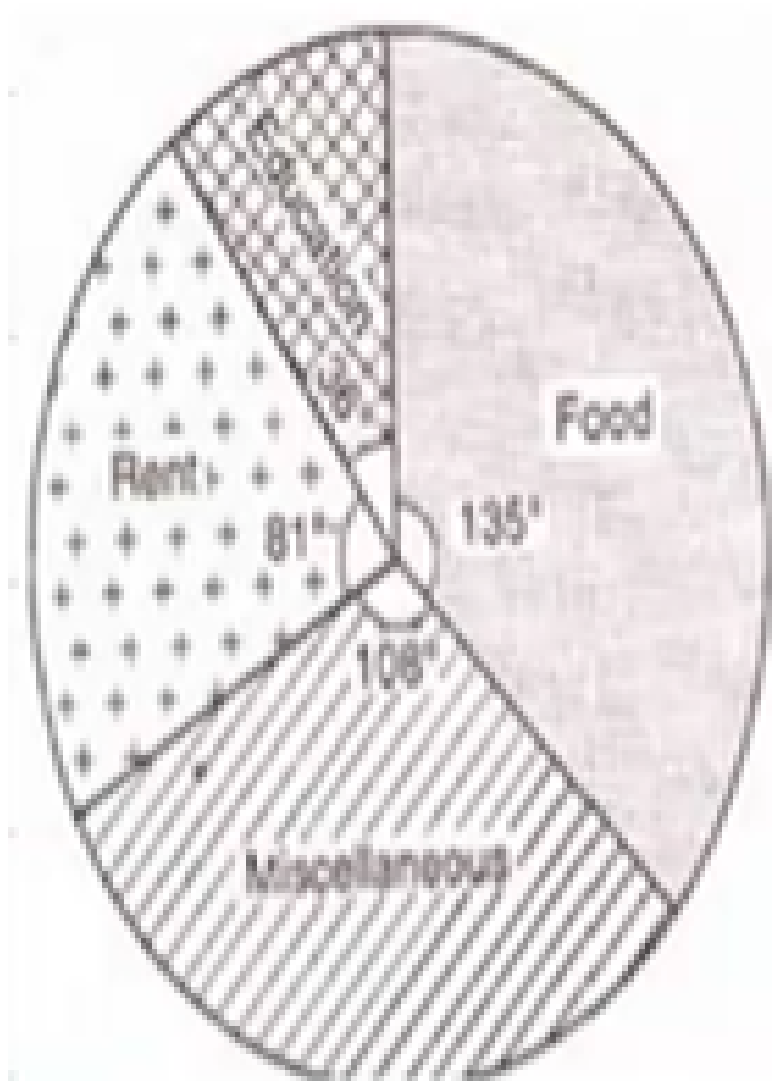




Watch Video Solution

32. The following pie-chart shows the monthly expenditure of Shikha on various items. If she spends Rs. 16000 per month, answer the following questions: How much does she spend on rent? How much does she spend on education? What is the ratio of expenses on

food and rent?



Watch Video Solution

