



MATHS

BOOKS - RS AGGARWAL MATHS (HINGLISH)

REFLECTION AND ROTATIONAL SYMMETRY

Examples

1. A line segment is symmetrical about its perpendicular bisector. True or false?

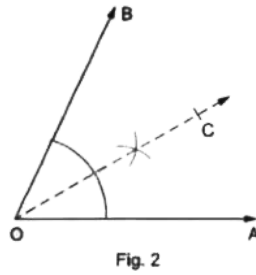
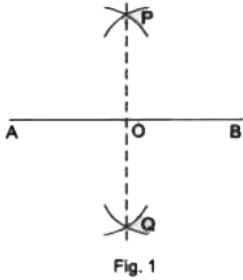


[Watch Video Solution](#)

2. A given angle having equal arms is symmetrical about the bisector of the angle.

In Fig. 2, $\angle AOB$ is a given angle in which $OA=OB$ and OC is the bisector of $\angle AOB$ Then,

$\angle AOB$ is symmetrical about OC.



Watch Video Solution

3. An isosceles triangle is symmetrical about the bisector of the angle included between the equal sides. In Fig. 3, $\triangle ABC$ is given in which $AB = AC$ and AD is the bisector of $\angle BAC$

Then, AD is the line of symmetry of $\triangle ABC$

.true or false?



[Watch Video Solution](#)

4. Let ABCD be a kite in which $AB = AD$ and $BC = DC$. Then, kite ABCD is symmetrical about the diagonal AC .true or false?



[Watch Video Solution](#)

5. A semicircle ACB has one line of symmetry, namely the perpendicular bisector of diameter AB . true or false?



[Watch Video Solution](#)

6. Let $ABCD$ be an isosceles trapezium in which $AB \parallel DC$ and $AD = BC$. Let E and F be the midpoints of AB and DC respectively. Then trap. $ABCD$ symmetrical about EF . true or false?



[Watch Video Solution](#)

7. A rectangle has two lines of symmetry, each one of which is the line joining the midpoints of opposite sides. true or false?



[Watch Video Solution](#)

8. A rhombus is symmetrical about each one of its diagonals. true or false?



[Watch Video Solution](#)

9. A square has 4 lines of symmetry, namely the diagonals and the lines joining the midpoints of its opposite sides. true or false?



[Watch Video Solution](#)

10. An equilateral triangle is symmetrical about each one of the bisectors of its interior angles. true or false?



[Watch Video Solution](#)

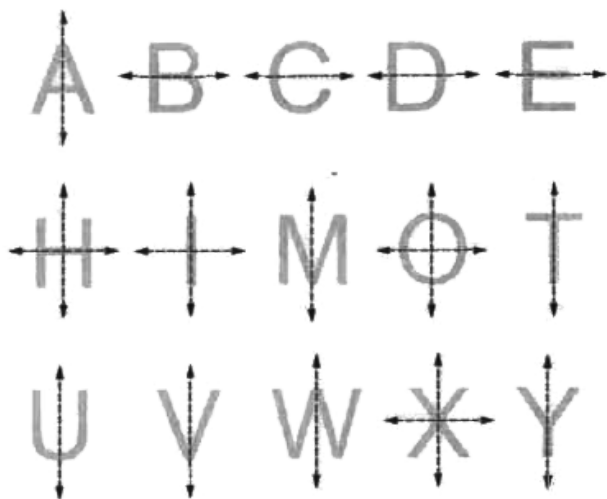
11. A circle is symmetrical about one of its diameters. True or False



Watch Video Solution

12. Which of the following capital letters of the English alphabet is symmetrical about the

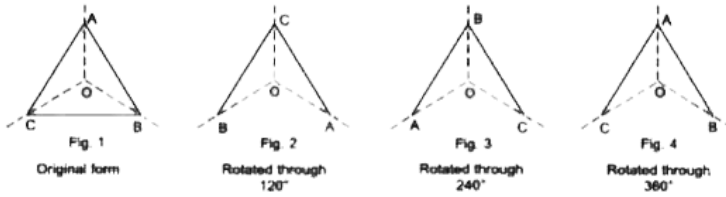
dotted line or lines as shown.



Watch Video Solution

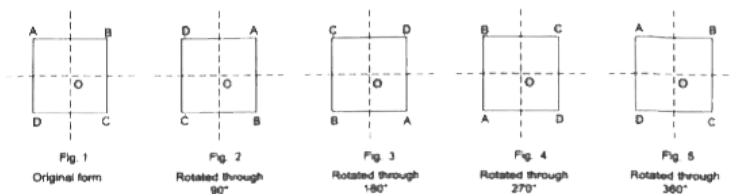
13. Let us rotate an equilateral $\triangle ABC$ (given in Fig.1) through 120° , 240° and 360° to attain the positions shown in Fig.2, Fig.3, Fig.4

respectively.



Watch Video Solution

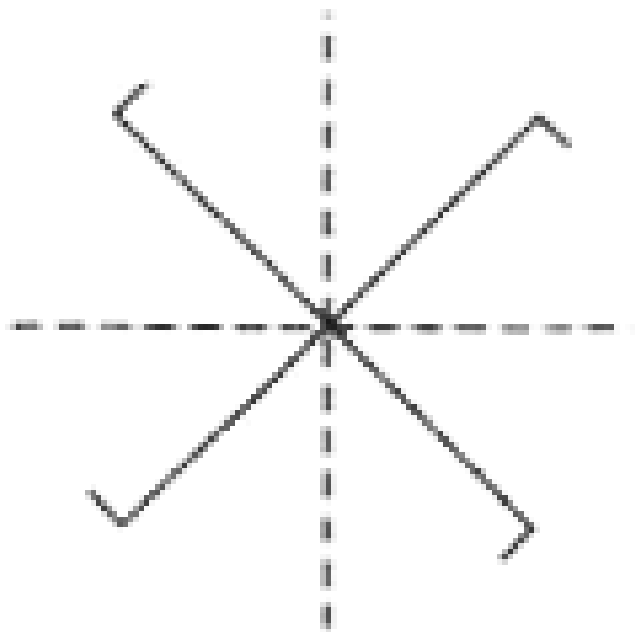
14. Let us rotate a square ABCD (given in Fig.1) through 90° , 180° , 270° and 360° to attain the positions shown in Fig.2, Fig.3, Fig.4 and Fig.5 respectively.





Watch Video Solution

15. If we rotate the adjoining figure through 90° , 180° , 270° and 360° then each time the figure will fit exactly onto itself. Thus, the given figure has a rotational symmetry of order 4.





Watch Video Solution

16. Each of the letters H,I,N,O,S,X and Z has a rotational symmetry of order 2, since each one of these letters when rotated through 180° and 360° will fit exactly onto itself each time.



Original position

Rotated through 180°



Original position

Rotated through 180°



Original position

Rotated through 180°



Original position

Rotated through 180°



Original position

Rotated through 180°



Original position

Rotated through 180°



Original position

Rotated through 180°



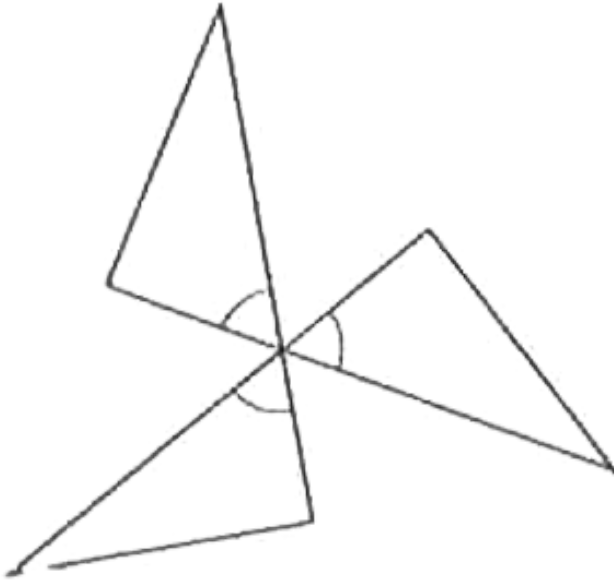
Watch Video Solution

17. The adjoining figure when rotated through 120° , 240° and 360° will fit exactly onto itself each time. So, it has a rotational symmetry of order 3.

(i) Rotating a figure through 90° clockwise is the same as rotating it anticlockwise through 270° .

(ii) Rotating a figure through 180° clockwise is the same as rotating it anticlockwise through

180° .



Watch Video Solution

18. A square has 4 lines of symmetry, namely the diagonals and the lines joining the

midpoints of its opposite sides. Also a square has rotational symmetry of order 4, when rotated through 90° , 180° , 270° and 360° .



[Watch Video Solution](#)

19. A rectangle has two lines of symmetry, each one of which is the line joining the midpoints of opposite sides. Also a rectangle has rotational symmetry of order 2, when rotated through 180° and 360° .



[Watch Video Solution](#)

20. An equilateral triangle has 3 lines of symmetry, namely, the bisectors of its interior angles. Also an equilateral triangle has rotational symmetry of order 3, when rotated through 120° , 240° and 360° .



Watch Video Solution

21. The letter H has two lines of symmetry. Also, H has rotational symmetry of order 2, when rotated through 180° and 360° . Similarly, the

letter I has two lines of symmetry and rotational symmetry of order 2. Similarly, each of the letters O and X has two lines of symmetry and rotational symmetry of order 2.



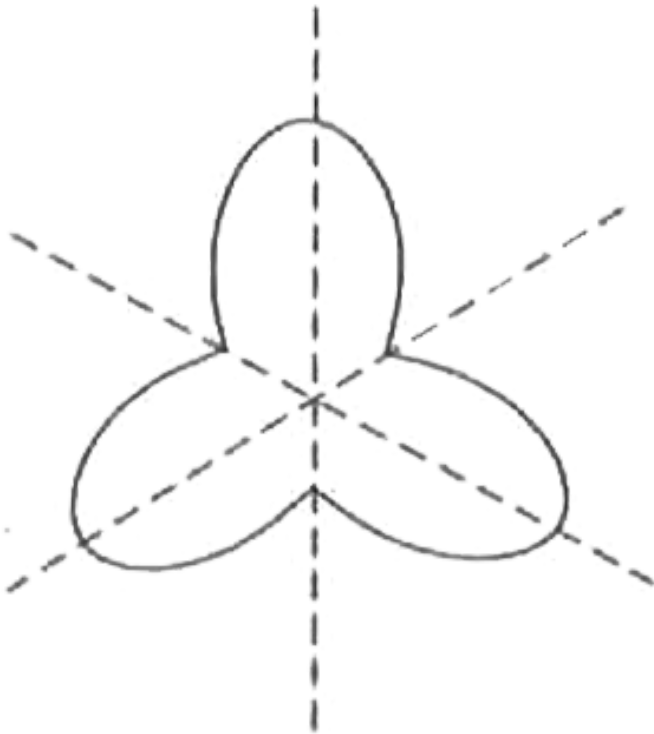
[Watch Video Solution](#)

22. An isosceles triangle has a line of symmetry but does not have rotational symmetry. true or false?



[Watch Video Solution](#)

23. Look at the adjoining figure. It has three lines of symmetry (shown by dotted lines). Also it has rotational symmetry of order 3 when rotated through 120° , 240° and 360° .



Watch Video Solution

Exercise A Mcq

1. A Scalene triangle has

- A. no line of symmetry
- B. one line of symmetry
- C. two lines of symmetry
- D. three lines of symmetry

Answer: A



2. A rectangle is symmetrical about

A. each one of its sides

B. each one of its diagonals

C. a line joining the midpoints of its
opposite sides

D. none of these

Answer: C



3. A square has

- A. one line of symmetry
- B. two lines of symmetry
- C. three lines of symmetry
- D. four lines of symmetry

Answer: D



Watch Video Solution

4. A rhombus is symmetrical about

A. the line joining the midpoints of its opposite sides

B. each of its diagonals

C. perpendicular bisector of each of its sides

D. none of these

Answer: B



Watch Video Solution

5. A circle has

A. no line of symmetry

B. one line of symmetry

C. two lines of symmetry

D. an unlimited number of lines of symmetry.

Answer: D



Watch Video Solution

6. In $\triangle ABC$, $AB = AC$ and $AD \perp BC$, $BE \perp AC$ and $CF \perp AB$. Then $\triangle ABC$ is symmetrical about

A. AD

B. BE

C. CF

D. None of these

Answer: A



Watch Video Solution

7. A kite has one line of symmetry. true or false?

A. the diagonal AC

B. the diagonal BD

C. none of these

D. All of the above

Answer: A



Watch Video Solution

8. The letter O of the English alphabet has

- A. no line of symmetry
- B. one line of symmetry
- C. two lines of symmetry
- D. none of these

Answer: C



Watch Video Solution

9. The letter Z of the English alphabet has

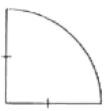
- A. no line of symmetry
- B. one line of symmetry
- C. two lines of symmetry
- D. none of these

Answer: A



Watch Video Solution

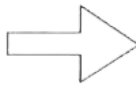
10. Draw the line (or lines) of symmetry of each of the following figures.



(i)



(ii)



(iii)



(iv)



[Watch Video Solution](#)

Exercise A True False

1. Which of the following statements are true and which of them are false?

(i) A parallelogram has no line of symmetry.



[Watch Video Solution](#)

2. Which of the following statements are true and which of them are false?

(ii) An angle with equal arms has its bisector as the line of symmetry.



[Watch Video Solution](#)

3. Which of the following statements are true and which of them are false?
(iii) An equilateral triangle has three lines of symmetry.



[Watch Video Solution](#)

4. Which of the following statements are true and which of them are false?

(iv) A parallelogram has four lines of symmetry.



[Watch Video Solution](#)

5. Which of the following statements are true and which of them are false?

(v) A square has four lines of symmetry.



[Watch Video Solution](#)

6. Which of the following statements are true and which of them are false?

(vi) A rectangle has two lines of symmetry.



[Watch Video Solution](#)

7. Which of the following statements are true and which of them are false?

(vii) Each one of the letters H, I, O, X of the English alphabet has two lines of symmetry.



[Watch Video Solution](#)

Exercise B

1. (i) How many lines of symmetry does an equilateral triangle have?

(ii) What is the order of rotational symmetry of an equilateral triangle?



[Watch Video Solution](#)

2. Through what different angles should a rectangle be rotated to be in symmetrical position with the original position?



[Watch Video Solution](#)

3. Discuss the rotational symmetry of a square.

Also, determine its lines of symmetry.



[Watch Video Solution](#)

4. (i) How many lines of symmetry does a rhombus have?

(ii) What is the order of rotational symmetry of a rhombus?



[Watch Video Solution](#)

5. Give an example of a letter of the English alphabet which has (i) No line of symmetry (ii) Rotational symmetry of order 2.



[Watch Video Solution](#)

6. Give an example of a figure that has a line of symmetry but does not have rotational symmetry.



[Watch Video Solution](#)

7. Does every trapezium have a line of symmetry?



[Watch Video Solution](#)

8. What is the line of symmetry of a semi-circle? Does it have rotational symmetry?



[Watch Video Solution](#)

9. Give an example of a geometrical figure which has neither a line of symmetry nor a rotational symmetry.



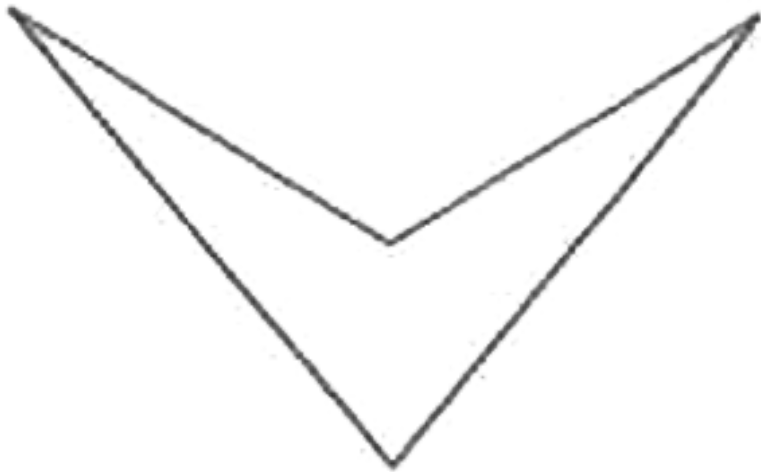
[Watch Video Solution](#)

10. Find

(i) the number of lines symmetry and

(ii) the order of rotational symmetry of thr

adjoining figure. Draw the line of symmetry.



[Watch Video Solution](#)

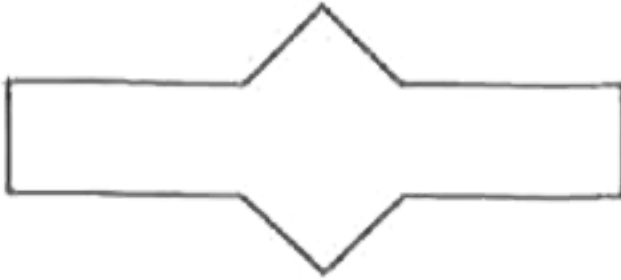
11. (i) How many lines of symmetry does the given figure have? Draw these lines.

(ii) what is the order of rotational symmetry of

the

given

figure?



[Watch Video Solution](#)

12. Give an example of a letter of the English alphabet which has (i) No line of symmetry (ii) Rotational symmetry of order 2.



[Watch Video Solution](#)

