



BIOLOGY

BOOKS - S DINESH & CO BIOLOGY (HINGLISH)

ORIGIN OF LIFE

Others

1. Universe originated

A. 10-20 billion year ago

B. 1-2 billion years ago

C. 500-700 million year back

D. 250-500 million year ago

Answer: A



Watch Video Solution

2. Total number of stars present in universe is

A. 10^{12}

B. 10^{16}

C. 10^{19}

D. 10^{22}

Answer: D



Watch Video Solution

3. Number of galaxies found in Universe is

A. 1000 million

B. 10,000 million

C. 1,00,000 million

D. 1000,000 million

Answer: C



Watch Video Solution

4. On an average a galaxy has stars

A. 1000 million

B. 100,000 million

C. 100 million

D. 10 million

Answer: B



Watch Video Solution

5. The galaxy to which our solar system belongs is called

A. Radio galaxy

B. Elliptical galaxy

C. Milky Way

D. Irregular

Answer: C



Watch Video Solution

6. Faint band of stars observed in the night sky from north to south direction is

A. Spirtal arm of Milky Way

B. Galactic disc of Milky Way

C. Edge of Milky Way

D. Meterorites

Answer: B



Watch Video Solution

7. Number of stars visible to naked eye is

A. 250000

B. 25000

C. 2000-2500

D. 200-250

Answer: C



Watch Video Solution

8. The universe is

A. Expanding

B. Contracting

C. Static

D. In second half of its cycle.

Answer: A



[Watch Video Solution](#)

9. The expanse of Akash Ganga is

- A. 1 light year
- B. 100 light years
- C. 10,000 light years
- D. 100,000 light years.

Answer: D



[Watch Video Solution](#)

10. The brightest star visible to us is

A. Alpha Centauri

B. Sirius

C. Pole star

D. None of the above.

Answer: B



Watch Video Solution

11. Alpha Centauri, our nearest star, is at a distance of

A. 1.2 light years

B. 2.3 light years

C. 3.7 light years

D. 4.3 light years

Answer: D



Watch Video Solution

12. Alpha Centauri is a

A. Triple star

B. Double star

C. Single star

D. Constellation

Answer: A



Watch Video Solution

13. Which one glows but does not twinkle?

A. Star

B. Planet

C. Asteroid

D. Meteorite

Answer: B



Watch Video Solution

14. Solar system contains planets

A. Seven

B. Nine

C. Eight

D. Six

Answer: c



Watch Video Solution

15. The largest planet of solar system is

A. Pluto

B. earth

C. Mercury

D. Jupiter

Answer: D



Watch Video Solution

16. Red Planet is

A. Mars

B. Jupiter

C. Venus

D. Uranus

Answer: A



Watch Video Solution

17. The number of terrestrial planets is

A. Four

B. Three

C. Two

D. One

Answer: A



Watch Video Solution

18. Inferior planets are

- A. Farthest from Sun
- B. In orbits outside that of earth
- C. In orbits inner to that of earth
- D. Gaseous planets

Answer: C



[Watch Video Solution](#)

19. Which planet is farthest to Sun ?

A. Uranus

B. Saturn

C. Jupiter

D. Neptune

Answer: D



[Watch Video Solution](#)

20. Morning and Evening stars are respectively

A. Pluto and Neptune

B. Jupiter and Mars

C. Venus and Mars

D. Venus only

Answer: D



Watch Video Solution

21. In solar system, earth lies between

A. Mercury and venus

B. Venus and Mars

C. Mars and Jupiter

D. Jupiter and Saturn

Answer: B



Watch Video Solution

22. Peculiarity of Saturn is

A. Absence of moons

B. Presence of moons

C. Occurrence of rings

D. Its brightness

Answer: C



Watch Video Solution

23. Sunlight takes time to reach earth.It is

A. 8.3 min

B. 6.7 min

C. 0.1 min

D. 0.03 min

Answer: A



Watch Video Solution

24. In astronomical units, the distance between earth and sun is

A. 1

B. 4.2

C. 14.5

D. 21

Answer: A



Watch Video Solution

25. A band of asteroids occurs in the solar system It lies between

A. Mercury and venus

B. Venus and earth

C. Earth and Mars

D. Mars and Jupiter

Answer: D



Watch Video Solution

26. Surface temperature of Sun is

A. 2000-3000° C

B. 6000° C

C. 10000° C

D. 50000° C

Answer: B



Watch Video Solution

27. When first formed the early earth was very hot. Its surface temperature was

- A. $1000 - 1200^{\circ}\text{C}$
- B. $3500 - 4000^{\circ}\text{C}$
- C. $5000 - 6000^{\circ}\text{C}$
- D. $8000 - 10000^{\circ}\text{C}$

Answer: C



Watch Video Solution

28. The temperature at the core of sun is about

A. 1 million. $^{\circ} C$

B. 10 million. $^{\circ} C$

C. 20 million C

D. 100 million . $^{\circ} C$

Answer: C



Watch Video Solution

29. Which one is maximum in sun?

A. Hydrogen

B. Helium

C. Carbon

D. Oxygen

Answer: A



Watch Video Solution

30. Amount of Hydrogen undergoing nuclear fusions per second in the core of sun is about

- A. 40,000 tonnes
- B. 400,000 tonnes
- C. 4 millin tonnes
- D. 40 million tonnes

Answer: C



Watch Video Solution

31. Earth is differentiated into three layers. The outer level is

- A. Lithosphere
- B. Asthenosphere
- C. Mantle
- D. Crust

Answer: D



Watch Video Solution

32. Earth's crust is thin in the region of

A. Plains

B. Mountains

C. Oceans

D. Foot hills and valleys

Answer: C



Watch Video Solution

33. Surface plates of earth are made of

A. Crust and solid part of upper mantle

B. Outer heterogeneous part of crust

C. Both outer heterogeneous and lower homogeneous crust.

D. Lower homogeneous part of crust

Answer: A



Watch Video Solution

34. Surface plates of earth are able to move with respect to one another because

- A. They lie over semi-molten asthenosphere
- B. Centrifugal force generated due to spinning of earth
- C. Orbital movement of earth
- D. Gravitational pull of Sun and Moon.

Answer: A



Watch Video Solution

35. Earth's axis is inclined at

A. 10.5°

B. 8.1°

C. 15.3°

D. 23.5°

Answer: D



Watch Video Solution

36. Earth completes one spin over its axis in

A. 24 hrs

B. 24 hrs and 3 min

C. 23 hrs 56 min and 4.1 sec

D. 23 hrs 59 min and 15.3 sec

Answer: C



Watch Video Solution

37. Earth completes one orbit around the sun
is

A. 365 days 5 hrs 48 min and 46 sec

B. 365 days 1 hrs 22 min and 3 sec

C. 364 days 22 hrs 58 min and 39 sec

D. 364 days 23 hrs 48 min and 51 sec

Answer: A



Watch Video Solution

38. In the region of poles, earth is

A. protruded

B. Depressed

C. Level

D. Irregular

Answer: B



Watch Video Solution

39. Lithosphere comprises

- A. Pedosphere and outer crust
- B. Outer crust and lower crust
- C. Pedosphere, outer crust and lower crust
- D. Crust and part of upper mantle

Answer: D



Watch Video Solution

40. Concentration of ozone in troposphere is

- A. 0.05 ppm

B. 0.1 ppm

C. 1.5 ppm

D. 10.0 ppm

Answer: A



Watch Video Solution

41. Which one is nearly absent in ozonosphere?

A. Dust particles

B. Water vapours

C. CO_2

D. All the above

Answer: D



Watch Video Solution

42. Ozonosphere occurs at a height of

A. 8-10 km above poles

B. 8-10 km above equator

C. 11-16 km above poles

D. 11-16 km above equator

Answer: C



Watch Video Solution

43. Ozonosphere is component of

A. Troposphere

B. Stratosphere

C. Mesosphere

D. Thermosphere

Answer: B



Watch Video Solution

44. Ozone makes the stratosphere

A. cooler by $17^{\circ} C$

B. Warmer by $17^{\circ} C$

C. Warmer by $53^{\circ} C$

D. cooler by $50^{\circ} C$

Answer: C



Watch Video Solution

45. Mesosphere is component of

A. Atmosphere

B. Hydrosphere

C. Lithosphere

D. Asthenosphere

Answer: A



Watch Video Solution

46. In mesosphere, the temperature

A. Rises from $-2^{\circ} C$ to $15^{\circ} C$

B. Rises from $-2^{\circ} C$ to $92^{\circ} C$

C. Decreases from $-2^{\circ} C$ to $-15^{\circ} C$

D. Decreases from $-2^{\circ} C$ to $-92^{\circ} C$

Answer: D



Watch Video Solution

47. Ozone of ozonosphere is formed from

A. Nitrogen oxides and oxygen

B. Chlorine, water and oxygen

C. Oxygen and oxygen

D. All the above

Answer: C



Watch Video Solution

48. Ozone is absent in

A. Troposphere

B. Mesosphere

C. Stratosphere

D. None of the above.

Answer: B



Watch Video Solution

49. Ionosphere occurs in

A. Thermosphere

B. Homosphere

C. Mesosphere

D. Startosphere

Answer: A



Watch Video Solution

50. In thermosphere the temperature

A. Rises with height to $200^{\circ}C$

B. Rises with height to $1500^{\circ}C$

C. First decreases then rises

D. Decreases to $-150^{\circ}C$

Answer: B



Watch Video Solution

51. Which layer of atmosphere is important for telecommunications?

A. Troposphere

B. Ozonosphere

C. Mesosphere

D. Thermosphere

Answer: D



Watch Video Solution

52. Atmospheric layer protective to living beings from harmful rays is

- A. Mesosphere
- B. Ozonosphere
- C. Thermosphere
- D. Both B and C

Answer: D



Watch Video Solution

53. Possibility of life on other planets is indicated by reported occurrences of

A. Organic substance

B. Methane

C. Water

D. Both B and C

Answer: D



Watch Video Solution

54. Theory of a abiogenesis is

A. Theory of spontaneous creation

B. Theory of special creation

C. Cosmozoic theory

D. Theory of panspermia

Answer: A



Watch Video Solution

55. The term protobiogenesis has been introduced by

A. Oparin

B. Fox

C. Haldane

D. Richer

Answer: B



Watch Video Solution

56. Biopoiesis is

A. Organic evolution

B. Evolution of organic elements

C. Origin of life

D. Life supporting system

Answer: C



Watch Video Solution

57. Abiogenesis believes that life originates from

A. Mud

B. Dung

C. Rain

D. All the above

Answer: D



Watch Video Solution

58. Who was the first scientist to doubt theory of spontaneous creation?

A. Paster

B. Spallanzani

C. Redi

D. Darwin

Answer: C



Watch Video Solution

59. The first life on earth developed through

A. Chemical evolution and interaction

B. Cosmozoa

C. Panspermia

D. All the above

Answer: A



Watch Video Solution

60. The age of earth in million years is approximately

A. 4600

B. 3000-4000

C. 2

D. 10000

Answer: A



Watch Video Solution

61. The first cell-like structures appeared in

A. Air

B. Mountains

C. Oceans

D. Soil

Answer: C



Watch Video Solution

62. At the time of origin of life, the surface temperature of earth was

A. $100^{\circ} C$

B. $50 - 60^{\circ} C$

C. $35 - 40^{\circ} C$

D. $10 - 15^{\circ} C$

Answer: B



Watch Video Solution

63. Besides the raw materials which helped in synthesis of early organic molecules

A. Lightning

B. Cosmic and ultraviolet radiations

C. Heat

D. All the above

Answer: D



Watch Video Solution

64. Primordial soup is the name of

A. Rainy season ponds

B. Hot solute rich early sea

C. Hot molten surface of early earth

D. Lava rich part of early earth

Answer: B



Watch Video Solution

65. Early broth or hot dilute soup contained

A. Carbohydrates

B. Amino acids

C. Fatty acids and nucleotides

D. All the above

Answer: D



Watch Video Solution

66. What did Miller obtain from his experiment simulating conditions of early earth?

- A. Amino acids
- B. Organic acids
- C. Peptides
- D. All the above

Answer: D



Watch Video Solution

67. Select the scientist who was able to form polypeptides from amino acids nonenzymatically without ribosomes

A. Orgel

B. Fox

C. Urey

D. Miller and Urey

Answer: B



Watch Video Solution

68. Artificial synthesis of ATP, porphyrins and nucleotides was achieved by

A. Miller

B. Urey

C. Fox

D. Bahadur

Answer: C



Watch Video Solution

69. Orgel was able to synthesis nonenzymatically

A. Nucleic acids

B. Protenoids

C. Fatty acids

D. Polysaccharides

Answer: A



Watch Video Solution

70. Bahadur (1958) obtained jivam or mixture of amino acids from

A. Formaldehyde and ammonia

B. Formaldehyde and ferrous chloride

C. Ferrous chloride and ammonia

D. Formaldehyde, ferrous chloride and ammonia.

Answer: D



Watch Video Solution

71. Earliest hot atmosphere of earth contained

A. Molecules of Hydrogen, Carbon and Nitrogen

B. Atoms of Hydrogen, Carbon, Oxygen and Nitrogen

C. Atoms of Hydrogen, Sulphur and Carbon

D. Molecules of Hydrogen, Methane and Ammonia

Answer: B



Watch Video Solution

72. Which one disappeared from earliest atmosphere during its conversion to primary atmosphere?

A. Atomic state of gases

B. Oxygen

C. Ammonia

D. Both A and B

Answer: C



Watch Video Solution

73. Primary atmosphere contained

A. CO_2 , NH_3 and H_2O

B. CH_4 , NH_3 , H_2 and H_2O

C. CO_2 , N_2 , H_2 and H_2O

D. CH_4 , CO_2 , N_2 , O_2 and H_2O

Answer: B



Watch Video Solution

74. First photosynthetic bacteria might have appeared around

A. 3.8-4.2 billion years ago

B. 3.5-3.8 billion years ago

C. 3.3-3.5 billion years ago

D. 2.6-2.8 billion years ago

Answer: B



Watch Video Solution

75. First autotrophs were

A. Anaerobic

B. Aerobic

C. Oxygenic but anaerobes

D. Mixed

Answer: A



Watch Video Solution

76. First aerobic photoautotrophs developed around

- A. 3.8-4.0 billion years ago
- B. 3.5-3.8 billion years ago
- C. 3.3-3.5 billion years ago
- D. 2.8-3.2 billion years ago

Answer: C



Watch Video Solution

77. Which organisms changed earth's atmosphere from reducing to oxidising?

A. chemoautotrophs

B. Bacterial phototrophs

C. Blue-green algae/oxygenic
photoautotrophs

D. Chemoheterotrophs.

Answer: C



Watch Video Solution

78. Primitive anaerobic organisms that depended upon organic molecules of broth or hot dilute soup were

- A. Autotrophs
- B. Chemoheterotrophs
- C. Photoautotrophs
- D. Heterotrophs

Answer: B



Watch Video Solution

79. Organisms which could obtain energy by degrading chemical molecules for synthesis of organic food were

A. Chemoheterotrophs

B. Autotrophs

C. Chemoautotrophs

D. Photoautotrophs

Answer: C



Watch Video Solution

80. who proved chemical origin of life or origin of biochemical noncatalytically from simple substance?

A. Oparin

B. Darwin

C. Haldane

D. Miller

Answer: D



Watch Video Solution

81. what is the peculiarity of chemoautotrophs?

A. Synthesis their own organic food

B. Pick up energy form chemical reactions

C. Convert light energy into chemical
energy

D. Both A and B

Answer: D



Watch Video Solution

82. Coacervates are

- A. Irreversible colloidal complexes
- B. Primitive cells
- C. Reversible colloidal complexes
- D. Covered by lipoprotein.

Answer: C



Watch Video Solution

83. Microspheres resemble living beings in their ability to

A. Assimilate chemicals

B. Grow

C. Divide

D. All the above

Answer: D



Watch Video Solution

84. Viruses might have developed

- A. Simultaneously with development of protobionts
- B. From eucaryotes
- C. From aerobic procaryotes
- D. From chemoautotrophs

Answer: A



Watch Video Solution

85. Primary atmosphere was

- A. Reducing
- B. Oxidising
- C. Rich in ozone
- D. Rich in NO_2

Answer: A



Watch Video Solution

86. methane of primary atmosphere disappeared in secondary atmosphere because of

A. Consumption in formation of carbohydrates

B. consumption in formation of various types of organic compounds

C. Escaping in space

D. Oxidation to CO_2

Answer: D



Watch Video Solution

87. Protobionts gave rise to

- A. Primitive procaryotes
- B. Primitive eucaryotes
- C. Primitive mesocaryotes
- D. All the above

Answer: A



[Watch Video Solution](#)

88. Eucaryotes developed around

- A. 1.6 billion years ago
- B. 2.0 billion years ago
- C. 2.5 billion years ago
- D. 2.8 billion years ago

Answer: A



[Watch Video Solution](#)

89. What happened to NH_3 present in primary atmosphere during its conversion to secondary atmosphere?

A. Its concentration decreased due to excessive formation of oxygen

B. Most of it got oxidised to nitrogen oxides

C. Got oxidised to N_2 and water

D. Was absorbed by photoautotrophs

Answer: C



Watch Video Solution

90. That reducing environment occurred on early earth is proved by the occurrence of

- A. Metal carbides and nitrides
- B. Metal oxides
- C. Uranite and Pyrite
- D. All the above

Answer: C



Watch Video Solution

91. Who said "abiogenesis first but biogenesis ever since"?

A. Haldane

B. Pasteur

C. Fox

D. Oparin

Answer: D



Watch Video Solution

92. Stanely Lloyd Miller was a

A. Astronomer

B. Biochemist

C. Botanist

D. Zoologist

Answer: B



Watch Video Solution

93. In Miller's experiment, the control contained all the ingredients except

- A. Electric sparks
- B. Condenser
- C. Boiling apparatus
- D. Methane

Answer: A



94. By shaking protein and carbohydrate mixture in water Oparin obtained

- A. Coacervates
- B. Microspheres
- C. Vesicles
- D. Both A and B

Answer: A



95. Microspheres were developed artificially by
Oparin

A. Oparin

B. Fox

C. Bahadur

D. Daemer

Answer: B



Watch Video Solution

96. Information molecules to evolve first were

A. Protein

B. DNA

C. RNA

D. All the above

Answer: C



Watch Video Solution

97. The first enzymes were

- A. Proteinaceous
- B. RNA molecules
- C. Inorganic
- D. Lipids

Answer: B



Watch Video Solution

98. Proteins that helped in trapping solar energy and developed an electric potential across covering membranes of protocells were

A. Chromophores

B. Chlorophores

C. Xanthophores

D. Both B and C

Answer: A



Watch Video Solution

99. Life originated in

A. Air

B. Soil

C. Mountains

D. Water

Answer: D



Watch Video Solution

100. Atmosphere of earth just before the origin of life consisted of

A. Water vapour, CH_4 , NH_3 and oxygen

B. CO_2 , NH_3 and CH_4

C. CH_4 , NH_3 , H_2 and water vapours

D. CH_4 , O_3 , O_2 and water vapours

Answer: C



Watch Video Solution

101. Which was absent/least abundant in the atmosphere at the time of origin of life?



Answer: C



Watch Video Solution

102. Gaseous mixture used by Miller for synthesis of amino acids through heat and electric discharge included

A. Methane, ammonia, hydrogen and water vapours

B. Methane, ammonia, nitrogen and water vapours

C. Nitrogen, methane, oxygen and water

D. Ammonia, carbon dioxide, nitrogen and water vapours

Answer: A



Watch Video Solution

103. Experimental proof that some simple molecules like H_2 , NH_3 , CH_4 and H_2O gave rise to amino acids during origin of life was provided by

A. Lamarck

B. Darwin

C. Stanley Miller

D. Harold Urey

Answer: C



Watch Video Solution

104. Experimental to prove that synthesis of organic compounds formed the basis of origin of life was performed by

A. Oparin

B. Haldane

C. Miller

D. Fox

Answer: C



Watch Video Solution

105. Earth originated in the past period of about

A. 4.5 billion years

B. 8.0 billion years

C. 3 billion years

D. 1 billion years

Answer: A



Watch Video Solution

106. Which was not present freely in the early atmosphere of the earth?

A. Water

B. Carbon monoxide

C. Hydrogen

D. Oxygen

Answer: D



Watch Video Solution

107. The first organisms were

A. chemoautotrophs

B. Chemoheterotrophs

C. Autotrophs

D. Eucaryotes

Answer: B



Watch Video Solution

108. Planet nearest to sun is

A. Earth

B. Moon

C. Mercury

D. Mars

Answer: C



Watch Video Solution

109. The most primitive cell-like chemical aggregates capables of growth and division were

A. chemoautotrophs

B. Eobionts

C. Procaryotes

D. Microspheres

Answer: D



Watch Video Solution

110. Russian scientist who proposed the theory of origin of life was

A. Oparin

B. Haldane

C. Miller

D. Fox

Answer: A



Watch Video Solution

111. Under certain conditions, scientists have got cell-like structures but without its true organisation. They are called

- A. Eobionts
- B. Protists
- C. Coacervates
- D. Microbes

Answer: C



Watch Video Solution

112. Ozone layer is important as it

- A. Reduces light reflection
- B. Provides oxygen to jet fluers
- C. Absorbs extra light-rays
- D. Filters out ultra-violet radiations.

Answer: D



Watch Video Solution

113. Organic compounds first evolved on earth and required for origin of life were

- A. Urea and amino acids
- B. Proteins and nucleic acids
- C. Protein and amino acids
- D. Urea and nucleic acid

Answer: B



114. choose the correct sequence during formation of chemicals on early earth

A. Ammonia, water, Nucleic acid ,Protein

B. Ammonia, Proteins,
Carbohydrates,Nucleic acid

C. Ammonia,Nucleic acid,Proteins,
carbohydrates

D. Proteins, carbohydrate, water ,Nucleic acid

Answer: B



Watch Video Solution

115. First photosynthetic organisms to appear on earth were

A. Bacteria

B. Green algae

C. Cyanobacteria

D. Bryophytes

Answer: A



Watch Video Solution

116. Oparin's theory is based of

A. Artificial synthesis

B. Spontaneous generation

C. God's creation

D. Panspermia

Answer: A



Watch Video Solution

117. For testing Oparin's hypothesis Stanley Miller and Harold Urey used H_2 , NH_3 and two other chemicals which were

A. O_2 and methane

B. O_2 and H_2O

C. CH_4 and H_2O

D. Salt and H_2O

Answer: C



Watch Video Solution

118. Who said that organisms develop from existing organisms

A. Aristotle

B. Louis Pasteur

C. Oparin

D. Morgan

Answer: B



Watch Video Solution

119. Coacervates are

A. Lipoproteins

B. Mixture of ammonia, carbohydrates and
water

C. Colloidal suspensions

D. Fatty acids and nitrogenous compounds

Answer: C



Watch Video Solution

120. Life cannot originate from inorganic materials now because of

A. Low atmospheric temperature

B. High degree of pollution

C. High atmosphere oxygen

D. Absence of raw materials.

Answer: C



Watch Video Solution

121. Who demonstrated that life comes from life with the help of flask with boiled broth?

A. Redi

B. Pasteur

C. Van Helmont

D. Arrhenius

Answer: B



Watch Video Solution

122. Most advanced theory of origin of life is that of

A. Catastrophic

B. Haldane and Oparin

C. Cosmozoic

D. Spontaneous.

Answer: B



Watch Video Solution

123. One of the possible early sources of energy was/were

A. Chlorophyll

B. CO_2

C. UV radiations and lightning

D. Green plants

Answer: C



Watch Video Solution

124. Swan-necked flask experiment related to theory of biogenesis was performed by

A. Louis Pasteur

B. Robert Koch

C. Francisco Redi

D. Aristotle

Answer: A



Watch Video Solution

125. Spark discharge apparatus for testing chemical origin of life was designed by

A. Urey and Miller

B. Jacob and Monod

C. Oparin and Haldane

D. Dixon and Joly

Answer: A



Watch Video Solution

126. Presence of NaCl in body fluid indicates that life originated in

A. Primitive ocean

B. Rain water lakes

C. Salt solution

D. All the above

Answer: A



View Text Solution

127. Theory of origin of life was proposed by

A. Tansley

B. Oparin

C. Darwin

D. Malthus

Answer: B



Watch Video Solution

128. Which is the most important for origin of life?

A. Oxygen

B. water

C. Nitrogen

D. Carbon

Answer: B



Watch Video Solution

129. Oldest rock is dated

A. 3.0 billion years

B. 3.8 billion years

C. 4.8 billion years

D. 5.7 billion years

Answer: C



Watch Video Solution

130. Chemical theory of origin of life was given

by

Or

Who proposed that the first form of life could

have come from pri-existing non living organic

molecules

A. Stanley Miller

B. Oparin and Haldane

C. Spallanzani

D. Louis Pasteur

Answer: B



Watch Video Solution

131. Protobiogenesis occurred

A. 1.2 billion years

B. 2. billion years

C. 2.5 billion years

D. more than 3.5 billion years ago

Answer: D



Watch Video Solution

132. Theory of Spontaneous creation was supported by

A. Van Helmont

B. Redi

C. Spallanzani

D. Pasteur

Answer: A



Watch Video Solution

133. One of the greatest advocates of the theory of special creation was

A. C. Darwin

B. aristotle

C. Father Saurez

D. Huxley

Answer: C



Watch Video Solution

134. A compound important in prebiotic evolution was

A. SO_2

B. CH_4

C. SO_3

D. NO

Answer: B



Watch Video Solution

135. Simple one-celled cyanobacteria-like organisms developed on earth

A. 5600 Million years

B. 5000 Million years

C. 4600 Million years

D. 3600 Million years or 3000 Million years

Answer: D



Watch Video Solution

136. Which ones are the most essential for origin of life?

A. Enzymes

B. Proteins

C. Carbohydrates

D. Nucleic acids

Answer: D



Watch Video Solution

137. Approximate age of earth (in million years)

is

A. 3600

B. 4600

C. 7200

D. 6000

Answer: B



Watch Video Solution

138. According to abiogenesis life originates from:

A. Non-living

B. Spontaneously

C. Chemicals

D. Other planets

Answer: A



Watch Video Solution

139. Abiogenesis is

A. Origin of life from non-living organisms

B. Origin of microbes from living organisms

C. Spontaneous generation

D. Origin of microbes and viruses.

Answer: C



Watch Video Solution

140. Experimental to prove chemical basis of origin of life carried out by Urey and Miller

Used NH_3 and

A. H_2O and H_2

B. H_2 , CH_4 and H_2O

C. CH_4 and H_2O

D. CH_4 and O_2

Answer: B



Watch Video Solution

141. Miller's experiment provided evidence for theory of

A. Special creation

B. Biogenesis

C. Abiogenesis

D. Organic evolution

Answer: D



Watch Video Solution

142. Experimental proof that organic compounds formed the basis of evolution was given by

A. Oparin

B. Pasteur

C. Miller and Urey

D. Spallanzani

Answer: C



Watch Video Solution

143. which of the following has been basic to origin of life

A. Carbohydrates

B. Proteins

C. Nucleic acids

D. Nucleoproteins

Answer: C



Watch Video Solution

144. Theory of abiogenesis or spontaneous generations was finally disapproved by

A. Louis Pasteur

B. A.I Oparin

C. A.R Wallace

D. Sidney Fox

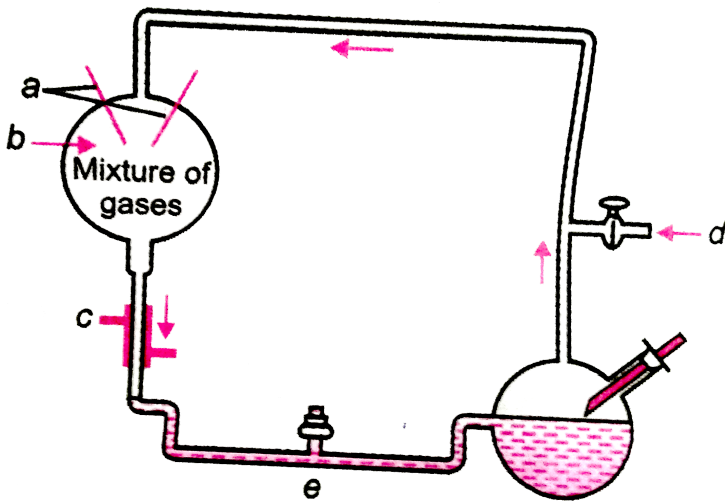
Answer: A



Watch Video Solution

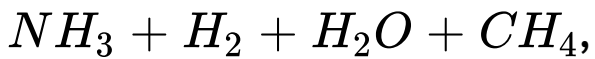
145. the diagram is of Miller's experiment.

What is the correct labelling



A. a-electrodes,

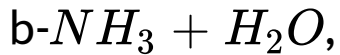
b-



c-cold

water, d-vaccum, e-U-trap

B. a-electrodes,



c-hot

water, d-tap, e-U-trap

C. a-electrods,

b-

$NH_3 + H_2O + H_2 + CH_4$ c-steam , d-

sink, e-U-trap.

D. a-electrods, b- $NH_3 + CH_4$,c- cold water,

d-sink, e-U-trap or (E) a- electrodes, b-

NH_3, H_2, CO_2, CH_4 , c-hot water, d-

vaccum, e-U-trap

Answer: A



Watch Video Solution

146. Assertion Coacervates are believed to be precursors of life.

Reason Coacervates were self duplicating aggregates of proteins surrounded by lipid molecules

- A. both true but reason is not correct explanation
- B. assertion true but reason is wrong
- C. both are wrong
- D. Both are correct

Answer: D



Watch Video Solution

147. Coacervates were experimentally produced by

A. Oparin and sidney Fox

B. fischer and Huxley

C. Jacob and monod

D. Urey and Miller

Answer: A



Watch Video Solution

148. who disapproved abiogenesis for the first time?

A. Lamarck

B. F.Redi

C. Pasteur

D. Darwin

Answer: B



Watch Video Solution

149. Which one of the following experiments suggests that simplest living organisms could not have originated spontaneously from non-living matter

- A. Microbes did not appear in stored meat.
- B. Microbes appeared from unsterilised organic matter

C. Larvae could appear in decaying organic matter

D. Meat was not spoiled when heated and kept in sealed vessel

Answer: D



Watch Video Solution

150. The idea that life origination from pre-existing life is referred as

A. Biogenesis theory

B. Abiogenesis theory

C. Special creation theory

D. Extra terrestrial theory

Answer: A



Watch Video Solution

151. Stanley Miller's experiment supports

A. Abiogenesis

B. Biogenesis

C. Pangenesis

D. Chemical theory

Answer: D



Watch Video Solution

152. Stanley Miller's experiment supports

A. Abiogenesis

B. Biogenesis

C. Pangenesis

D. Chemical theory

Answer: D



Watch Video Solution

153. Cyanobacteria originated on earth about

A. 4.3-4.8 billion years ago

B. 3.3-3.8 billion years ago

C. 2.3-2.8 billion years ago

D. 1.3-1.8 billion years ago

Answer: B



Watch Video Solution

154. Concervates belong to the category of

A. Protozoans

B. Molecular aggregates

C. Molecular aggregates surrounded by
lipid membrane

D. Cyanobacteria

Answer: B



Watch Video Solution

155. The oldest fossil record of blue-green algae is 2.9 billion years old. It is

A. Stromatolites

B. Archaeopteryx

C. Archaeospheroides

D. Chlamydomonas

Answer: C



Watch Video Solution

156. First life consisted of

A. Provirus

B. Virus

C. Bacteria

D. Protovirus

Answer: D



Watch Video Solution

157. Which one of the following amino-acids was not found to be synthesized in Miller's experiment

A. Alanine

B. Glycine

C. Aspartic acid

D. Glutamic acid

Answer: D



Watch Video Solution

158. Assertion (A) : The earliest organisms that appeared on the Earth were non-green and presumably anaerobis.

Reason (R) : The first autotrophic organisms were the chemoautotrophs that never released oxygen.

A. both true but reason is not correct explanation

B. assertion true but reason is wrong

C. both are wrong

D. Assertion. Coacervates are believed to be precursors of life. Reason. Coacervates were self duplicating aggregates of proteins surrounded by lipid molecules

Answer: B



Watch Video Solution

159. Miller and Urey performed an experiment to prove the origin of life. They took gases ammonia and hydrogen alongwith

A. CO_2 and H_2O

B. N_2 and H_2O

C. CH_4 and N_2

D. H_2O and CH_4

Answer: C



Watch Video Solution

160. Hot dilute soup was given by

A. Haldane

B. Urey

C. oparin

D. None of the above.

Answer: A



Watch Video Solution

161. Coacervates are

A. Protein aggregates

B. Protein and lipid aggregates

C. Chemical aggregates

D. Protobionts with polysaccharides,
proteins and water

Answer: C



Watch Video Solution

162. The concept of chemical evolution is based on :

A. Effect fo solar radiations on chemicals

B. Interaction of water, air and clay under intense heat

C. Combination of chemicals under hot moist environment conditions

D. Crystallisation of chemicals

Answer: C



Watch Video Solution

163. Select the wrong pair :

A. haldaneâ€|â€|â€|.Hot dilute soup

B. Oparinâ€|â€|â€|â€|â€|..Protobionts

C. Foxâ€|â€|â€|â€|â€|â€|â€|â€|Coacervates

D. Rediâ€|â€|â€|â€|â€|.Biogenesis

Answer: C



Watch Video Solution

164. The first living form resulting from the final stage of chemical evolution of life is called

A. Prebiont

B. Protobiont

C. Protenoid

D. Probiont

Answer: B



Watch Video Solution

165. Scientist believe that life on earth originated by

- A. Spontaneous generation
- B. Chemical evolution/Abiogenesis
- C. Special creation
- D. Extraterrestrial transfer

Answer: B



Watch Video Solution

166. Which of the following was formed in S. Miller's experiment?

A. Microspheres

B. Nucleic acids

C. Amino acids

D. UV radiations

Answer: C



Watch Video Solution

167. S.L Miller's closed flask contained

A. CH_4

B. NH_3 and water vapours

C. H_2

D. All the above

Answer: D



Watch Video Solution

168. Microspheres possessed a membrane of

A. Lipid and protein

B. Lipid

C. Carbohydrates

D. Fats

Answer: B



Watch Video Solution

169. Which is incorrect about protobionts in abiogenic origin of life?

- A. They were partially isolated from surroundings
- B. They could maintain an internal environment
- C. They were able to reproduce
- D. They could separate combination of molecules from the surroundings.

Answer: B



Watch Video Solution

170. Origin of life occurred in

A. Precambrian

B. Coenozoic

C. Palaeozoic

D. Mesozoic

Answer: A



Watch Video Solution

171. In their experiment to prove origin of life, Miller and Urey took gases

A. Methane, ethane, hydrogen, ammonia

B. Methane, ethane, ammonia, water vapours

C. Ammonia, water vapours, methane, hydrogen.

D. none of the above

Answer: C



Watch Video Solution

172. Miller performed experiment to prove abiogenetic molecular evolution of life. Which molecule was not present in Miller's experiment

A. Water

B. Methane

C. Oxygen

D. Ammonia

Answer: C



Watch Video Solution

173. Which is incorrect

A. J.B.S Haldane - law fo continuity of
germplasm

B. Louis pasteur - Germ theory of disease
and immunology

C. De vries - Mutation theory

D. Lemaitre - Big bang theory

Answer: A



Watch Video Solution

174. In the early earth, water and CO_2 were produced by the combination of O_2 with

A. Ammonia and Methane

B. Organic matter

C. Hydrogen sulphide

D. Sulphates and nitrates or (E) Hydrogen

Answer: A



Watch Video Solution

175. Primitive atmosphere of earth contained water vapours, hydrogen , ammonia and

A. CO_2

B. O_2

C. N_2

D. Methane

Answer: D



Watch Video Solution

176. Oparin-Haldane's view on the origin of life was first experimentally proved by

A. Malthus

B. Plato

C. Louis pasteur

D. Stanley Miller

Answer: D



Watch Video Solution

177. That first life on earth originated from non-living materials has been explained by

A. theory of biogenesis

B. Theory of abiogenesis

C. Theory of Special creation

D. Theory of extra-terrestrial origin

Answer: B



Watch Video Solution

178. Which one is considered the first biological catalyst when life originated on earth

A. RNA

B. DNA

C. Protein

D. Lipid

Answer: A



Watch Video Solution

179. Organic compounds first evolved on earth and required for origin of life were

A. Proteins and nucleic acids

B. Urea and amino acids

C. Proteins and amino acids

D. Urea and nucleic acid

Answer: A



Watch Video Solution

180. In miller's experiment to mimic early earth conditions , what was the temperature in the flask

A. $800^{\circ}C$

B. $1200^{\circ}C$

C. $200^{\circ}C$

D. $400^{\circ}C$

Answer: A



Watch Video Solution

181. According to the theory of spontaneous generation :

A. Life originated from outer space

B. Life originated from decaying and rotting matter like straw, mud etc.

C. Life came from pre-existing life

D. Life came from both living and non-living matter.

Answer: B



Watch Video Solution

182. Ionosphere is between

A. Stratosphere and mesosphere

B. Mesosphere and themosphere

C. Trososphere and stratosphere

D. Trososphere and thermosphere

Answer: B



Watch Video Solution

183. Oparin and Haldane proposed:

A. Theory of natural selection

B. That mutation caused speciation

C. That migration affects genetic
equilibrium

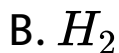
D. That the first form of life could have
come molecules or (E) That evolution of
life forms had been driven by use and
disuse of organs.

Answer: D



Watch Video Solution

184. In miller's experiment the following was not part of the starting chemicals



Answer: A



Watch Video Solution

185. Which was the first catalytic molecule during evolution of life?

A. DNA

B. rRNA

C. tRNA

D. mRNA

Answer: B



Watch Video Solution

186. Who gave the theory which is known as primary abiogenesis

A. Oparin

B. Haldane

C. Miller

D. Urey

Answer: A



Watch Video Solution

187. The most common chemical compounds formed in Urey-Miller's experiment were

A. Amino acids

B. Ammonia

C. Methane

D. Vitamins

Answer: A



Watch Video Solution

188. Following are the two statements regarding the origin of life

(a) the earliest organisms that appeared on the earth were nongreen and presumably anaerobic

The first autotrophic organisms were the chemoautotrophs that never released oxygen.

Of the above statements which one of following options is correct

- A. Both a and b are false
- B. a is correct but b is false
- C. b is correct but a is false
- D. Both a and b are correct

Answer: D



Watch Video Solution

189. which is the correct sequence of events in the origin of life:

I. Formation of protobionts

II. Synthesis of organic monomers III. Synthesis of organic polymers

IV Formation of DNA based genetic systems

A. II,III,IV,I

B. I,II,III,IV

C. I,III,II,IV

D. II,III,I,IV

Answer: D



Watch Video Solution

190. Big bang theory was proposed by

A. Lemaitre

B. Kant

C. Miller

D. Urey

Answer: N/A



[Watch Video Solution](#)

191. Our galaxy is

- A. Sun and its planets
- B. Milky way
- C. Earth and moon
- D. Earth

Answer: N/A



[Watch Video Solution](#)

192. Cocervates were formed by

A. Radiations

B. Polymerisation

C. Polymerisation and aggregation

D. DNA

Answer: N/A



Watch Video Solution

193. What is the name fo theory which states that life develops from life?

A. Cosmozoic

B. Biogenesis

C. Protobiogenesis

D. Oparin-Haldane theory

Answer: N/A



Watch Video Solution

194. Origin Of Life

- A. Special creation
- B. Spontaneous generation
- C. Panspermia
- D. Biogenesis

Answer: N/A



Watch Video Solution

195. Spallanzani kept boiled nutrition broth indefinitely in

- A. Covered jars
- B. Uncovered jars
- C. Sealed flasks
- D. Swan necked flasks

Answer: N/A



Watch Video Solution

196. The term protobiogenesis is used for theory of

- A. Special creation
- B. Biochemical origin
- C. Panspermia
- D. Spontaneous generation

Answer: N/A



Watch Video Solution

197. In early earth oxygen

A. Initially occurred freely but soon combined with other elements

B. Never occurred freely

C. Was always present in the atmosphere

D. Was always present in the interior of earth

Answer: N/A



Watch Video Solution

198. Fox heated a mixture of amino acids and got

A. Purines and pyrimidines

B. Nucleotides

C. Polypeptides

D. All the above

Answer: N/A



Watch Video Solution

