



CHEMISTRY

BOOKS - NCERT EXEMPLAR CHEMISTRY (HINGLISH)

CARBON AND ITS COMPOUNDS

Carbon And Its Compounds

1. Carbon exists in the atmosphere in the form of

- A. Only carbon monoxide
- B. carbon monoxide in traces and carbon dioxide
- C. Only carbon dioxide

D. coal

Answer: C

 [Watch Video Solution](#)

2. Which of the following statements are usually correct for carbon compounds ? These

(1) are good conductors of electricity.

(2) are poor conductors of electricity.

(3) have strong forces of attraction between their molecules.

(4) do not have strong forces of attraction between their molecules.

A. (i) and (iii)

B. (ii) and (iii)

C. (i) and (iv)

D. (ii) and (iv)

Answer: D



[Watch Video Solution](#)

3. A molecule of ammonia (NH_3) has (अमोनिया अणु है)

A. Only single bonds

B. Only double bonds

C. Only triple bonds

D. two double bonds and one single bond

Answer: A



[Watch Video Solution](#)

4. Buckminsterfullerene (बकमिंसटर फुलरीन) is an allotropic form of

A. phosphorus

B. sulphur

C. carbon

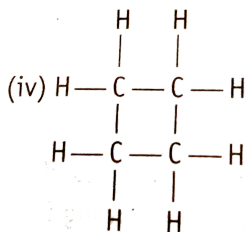
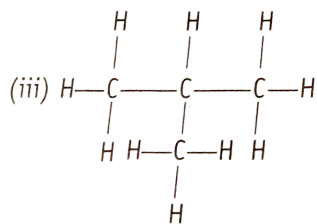
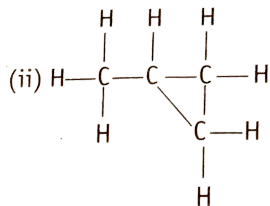
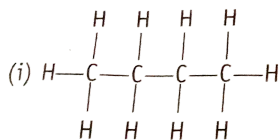
D. tin

Answer: C



Watch Video Solution

5. Which of the following are correct structural isomers of butane ?



A. (i) and (iii)

B. (ii) and (iv)

C. (i) and (ii)

D. (iii) and (iv)

Answer: A



Watch Video Solution



In the above given reaction, alkaline $KMnO_4$ acts as

- A. reducing agent
- B. oxidising agent
- C. catalyst
- D. dehydrating agent

Answer: B

 [Watch Video Solution](#)

7. Oils on treating with hydrogen in the presence of palladium or nickel catalyst form fats. This is an example of :

- A. addition reaction
- B. substitution reaction
- C. combustion reaction
- D. oxidation reaction

Answer: A



Watch Video Solution

8. In which of the following compounds -OH is the functional group ?

- A. Butanone
- B. Butanol
- C. Butanoic

D. Butanal

Answer: B



Watch Video Solution

9. The soap molecule has a

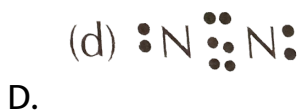
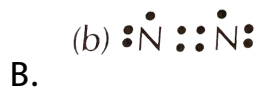
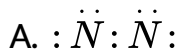
- A. hydrophilic head and a hydrophobic tail
- B. hydrophobic head and a hydrophilic tail
- C. hydrophobic head and a hydrophobic tail
- D. hydrophilic head and a hydrophilic tail

Answer: A



Watch Video Solution

10. Which of the following is the correct representation of electron dot structure of nitrogen ?

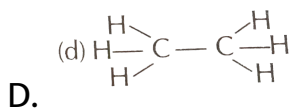
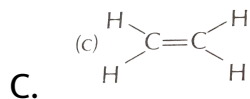
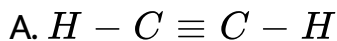


Answer: D



Watch Video Solution

11. Structural formula of ethyne is



Answer: A

 [Watch Video Solution](#)

12. Identify the unsaturated compounds from the following.

(i) Propane

(ii) Propene

(iii) Propyne

(iv) Chloropropane

A. (i) and (ii)

B. (ii) and (iv)

C. (iii) and (iv)

D. (ii) and (iii)

Answer: D



Watch Video Solution

13. Chlorine reacts with saturated hydrocarbons at room temperature in the

A. absence of sunlight

B. Presence of sunlight

C. presence of water

D. presence of hydrochloric acid

Answer: B



Watch Video Solution

14. In the soap micelles

A. the ionic end of soap is on the surface of the cluster

while the carbon chain is in the interior of the cluster

B. ionic end of soap is in the interior of cluster and the

carbon chain is out of the cluster

C. both ionic end and carbon chain in the interior of the

cluster

D. both ionic end and carbon chain on the exterior of the cluster

Answer: A

 [Watch Video Solution](#)

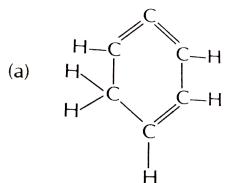
15. Pentane has the molecular formula C_5H_{12} . It has

- A. 5 covalent bonds
- B. 12 covalent bonds
- C. 16 covalent bonds
- D. 17 covalent bonds

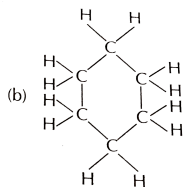
Answer: C

 [Watch Video Solution](#)

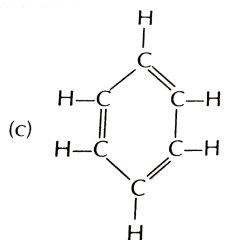
16. Structural formula of benzene is



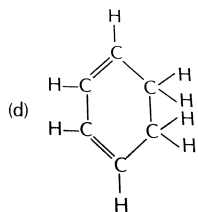
A.



B.



C.



D.

Answer: C



Watch Video Solution

17. Ethanol reacts with sodium and forms two products. These are

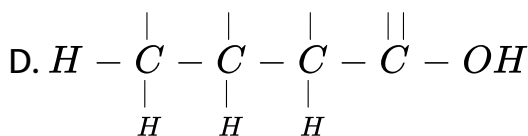
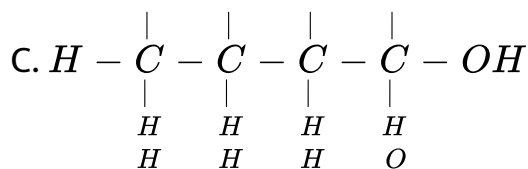
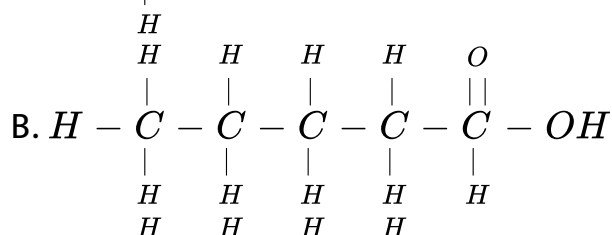
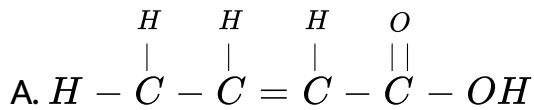
- A. sodium ethanoate and hydrogen
- B. sodium ethanoate and oxygen
- C. sodium ethoxide and hydrogen
- D. sodium ethoxide and oxygen

Answer: C



Watch Video Solution

18. The correct structural formula of butanoic acid is



Answer: D

 [Watch Video Solution](#)

19. Vinegar is a solution of

A. 50 % – 60 % acetic acid in alcohol

B. 5 % – 8 % acetic acid in alcohol

C. 5 % – 8 % acetic acid in water

D. 50 % – 60 % acetic acid in water

Answer: C



Watch Video Solution

20. Mineral acids are stronger acids than carboxylic acids because

(i) mineral acids are completely ionised.

(ii) carboxylic acids are completely ionised.

(iii) mineral acids are partially ionised.

(iv) carboxylic acids are partially ionised.

A. (i) and (iv)

B. (ii) and (iii)

C. (i) and (ii)

D. (iii) and (iv)

Answer: A



Watch Video Solution

21. Carbon forms four covalent bonds by sharing its four valence electrons with four univalent atoms, e.g., hydrogen.

After the formation of four bonds, carbon attains the electronic configuration of

A. helium

B. neon

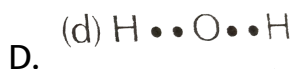
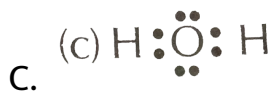
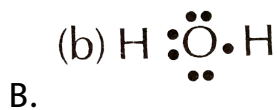
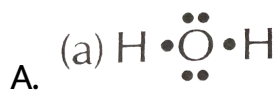
C. argon

D. krypton

Answer: B

 [Watch Video Solution](#)

22. The correct electron dot structure of a water molecule is



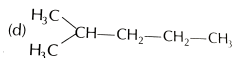
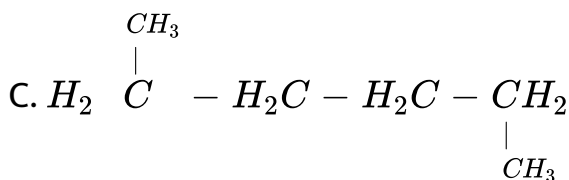
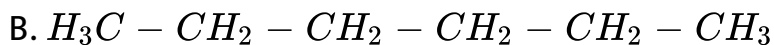
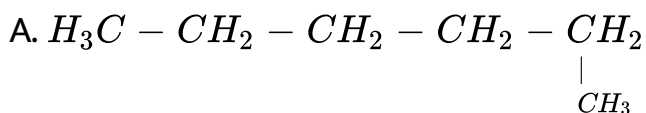
Answer: C



Watch Video Solution

23. Which of the following is not a straight chain hydrocarbon

?



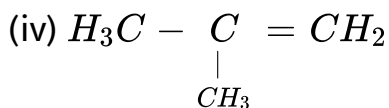
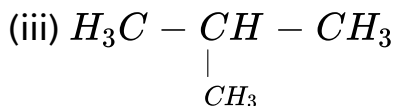
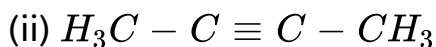
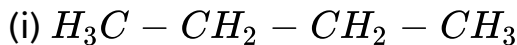
D.

Answer: D



Watch Video Solution

24. Which among the following are unsaturated hydrocarbons ?



A. (i) and (iii)

B. (ii) and (iii)

C. (ii) and (iv)

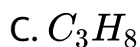
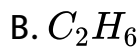
D. (iii) and (iv)

Answer: C



Watch Video Solution

25. Which of the following does not belong to the same homologous series ?



Answer: D

 [Watch Video Solution](#)

26. The name of the compound of $CH_3 - CH_2 - CHO$;

A. propanal

B. propanone

C. ethanol

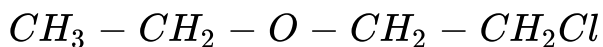
D. ethanal

Answer: A



Watch Video Solution

27. The heteroatoms present in



(i) oxygen, (ii) carbon

(iii) hydrogen, (iv) chlorine

A. (i) and (ii)

B. (ii) and (iii)

C. (iii) and (iv)

D. (i) and (iv)

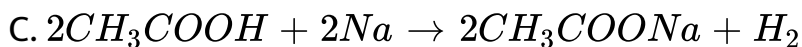
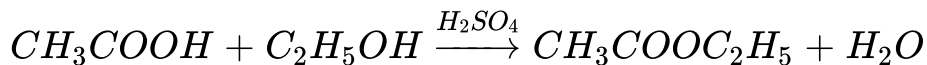
Answer: D

 [Watch Video Solution](#)

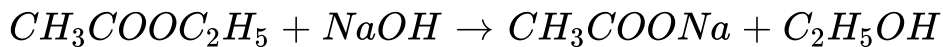
28. Which of the following represents saponification reaction ?



B.



D.



Answer: D



[Watch Video Solution](#)

29. The first member of alkyne homologous series is

A. ethyne

B. ethene

C. propyne

D. methane

Answer: A

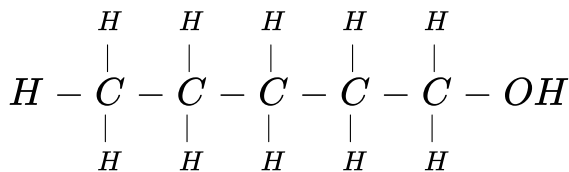
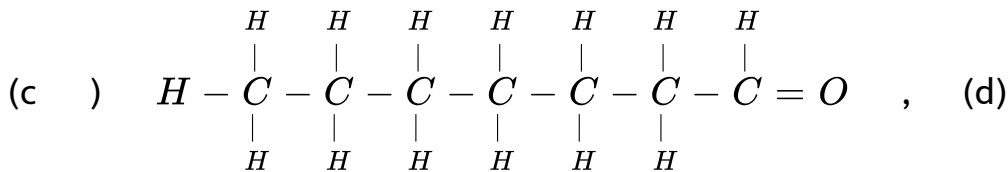
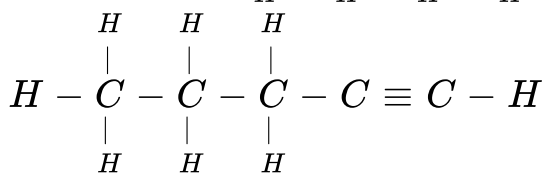
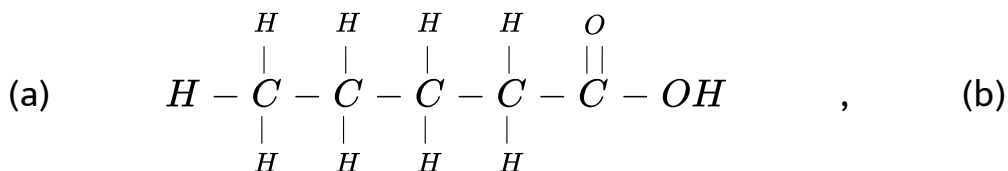


[Watch Video Solution](#)

30. Draw the electron dot structure of ethyne and also draw its structure of ethyne and also its structural formula.

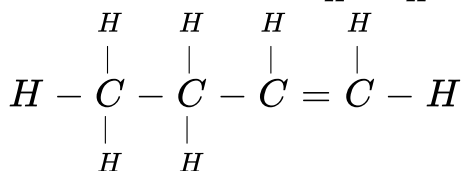
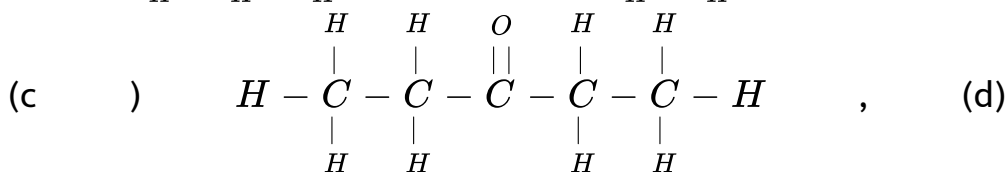
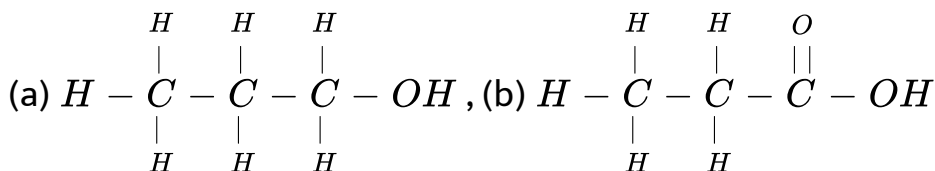
 Watch Video Solution

31. Write the names of the following compounds.



 Watch Video Solution

32. Identify and name the functional groups present in the following compounds.



33. A compound X is formed by the reaction of a carboxylic acid $C_2H_4O_2$ and an alcohol in the presence of a few drops of H_2SO_4 . The alcohol on oxidation with alkaline $KMnO_4$

followed by acidification gives the same carboxylic acid as used in this reaction. Give the names and structures of (a) carboxylic acid, (b) alcohol and (c) the compound X. Also write the reaction.



[Watch Video Solution](#)

34. Why detergents are better cleansing agents than soaps ?

Explain.



[Watch Video Solution](#)

35. Name the functional groups present in the following compounds.

(a) $CH_3COCH_2CH_2CH_2CH_3$, (b) $CH_3CH_2CH_2COOH$

(c) $CH_3CH_2CH_2CH_2CHO$, (d) CH_3CH_2OH



[Watch Video Solution](#)

36. How is ethene prepared from ethanol ? Give the reaction involved in it.



[Watch Video Solution](#)

37. Intake of small quantity of methanol can be lethal. Comment.



[Watch Video Solution](#)

38. A gas is evolved when ethanol reacts with sodium. Name the gas evolved and also write the balanced chemical equation of the reaction involved.



[Watch Video Solution](#)

39. Ethene is formed when ethanol at 443 K is heated with excess of concentrated sulphuric acid. What is the role of acid in the this reaction ? Write the balanced chemical equation of this reaction.



[Watch Video Solution](#)

40. Carbon, group (14) element in the periodic table, is know to from compounds with many elements.

Write an example of a compound formed with

(a) chlorine (group 17 of periodic table)

(b) oxygen (group 16 of periodic table)



[Watch Video Solution](#)

41. In electron dot structure, The valence shell electrons are represented by cross or dots.

 [Watch Video Solution](#)

42. Catenation is the ability of an atom to form bonds with other atoms of the same element . It is exhibited by both carbon and silicon. Compare the ability of catenation of the two elements .Give reasons.

 [Watch Video Solution](#)

43. Unsaturated hydrocarbons contain multiple bonds between the two C-atoms and show addition reaction. Give

the test to distinguish ethane from ethene.

 [Watch Video Solution](#)

44. Match the reactions given in Column I with the names given in Column II.

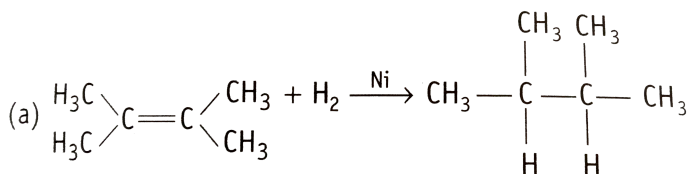
Column I	Column II
A. $\text{CH}_3\text{OH} + \text{CH}_3\text{COOH} \xrightarrow{\text{H}^+} \text{CH}_3\text{COOCH}_3 + \text{H}_2\text{O}$	1. Addition reaction
B. $\text{CH}_2 = \text{CH}_2 + \text{H}_2 \xrightarrow{\text{Ni}} \text{CH}_3 - \text{CH}_3$	2. Substitution reaction
C. $\text{CH}_4 + \text{Cl}_2 \xrightarrow{\text{Sunlight}} \text{CH}_3\text{Cl} + \text{HCl}$	3. Neutralisation reaction
D. $\text{CH}_3\text{COOH} + \text{NaOH} \longrightarrow \text{CH}_3\text{COONa} + \text{H}_2\text{O}$	4. Esterification reaction

 [Watch Video Solution](#)

45. Write the structural formulae of all isomers of hexane.

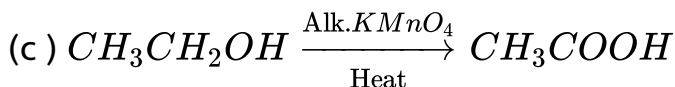
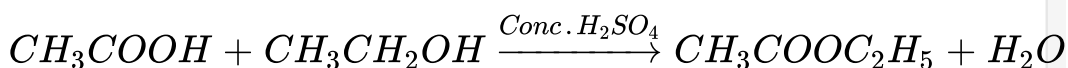
 [Watch Video Solution](#)

46. What is the role of metal or reagents written on arrows in the given chemical reactions ?



(a)

(b)



Watch Video Solution

47. A salt X is formed and a gas is evolved when ethanoic acid reacts with sodium hydrogen carbonate. Name the salt X and the gas evolved. Describe an activity and draw the diagram of the apparatus to prove that the evolved gas is the one which

you have named. Also, write the chemical equation of the reaction involved.



[Watch Video Solution](#)

48. (a) What are hydrocarbons ? Give examples.

(b) Give the structural differences between saturated and unsaturated hydrocarbons with two examples each.

(c) What is functional group ? Examples of four different functional groups.



[Watch Video Solution](#)

49. Name the reaction which is commonly used in the conversion of vegetable oil to fats. Explain the reaction involved in detail.



[Watch Video Solution](#)

50. (a) Write the formula and draw electron dot structure of carbon tetrachloride.

(b) What is saponification ? Write the reaction involved in this process.



[Watch Video Solution](#)

51. Esters are sweet-smelling substances and are used in making perfumes. Suggest some activity and the reaction involved for the preparation of an ester with well labelled diagram.



[Watch Video Solution](#)

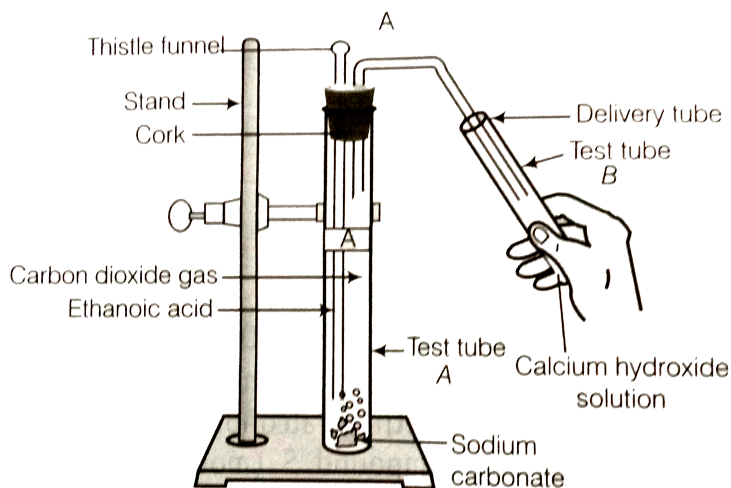
52. A compound C (molecular formula, $C_2H_4O_2$) reacts with Na metal to form a compound R and evolves a gas which burns with a pop sound. Compound C on treatment with an alcohol A in the presence of an acid forms a sweet smelling compound S (molecular formula, $C_3H_6O_2$). On addition of NaOH to C, it also gives R and water. S on treatment with NaOH solution gives back R and A.

Identify C, R, A, S and write down the reactions involved.



Watch Video Solution

53. Look at the figure and answer the following questions.



(a) What change would you observe in the calcium hydroxide solution taken in tube B ?

(b) Write the reaction involved in test tubes A and B respectively.

(c) If ethanol is given instead of ethanoic acid, would you expect same change ?

(d) How can a solution of lime water be prepared in the laboratory ?



 Watch Video Solution

54. How would you bring about the following conversions ?

Name the process and write the reaction involved.

(a) Ethanol to ethene , (b) Propanol to propanoic acid

Write the reactions.

 Watch Video Solution

55. Draw the possible isomers of the compound with molecular formula C_3H_6O and also give their electron dot structures.

 Watch Video Solution

56. Explain the given reactions with the examples.

(a) Hydrogenation reaction , (b) Oxidation reaction

(c) Substitution reaction , (d) Saponification reaction

(e) Combustion reaction



[Watch Video Solution](#)

57. An organic compound A on heating with concentrated H_2SO_4 forms a compound B which on addition of one mole of hydrogen in presence of Ni forms a compounds C. One mole od compound C on combustion form two moles of CO_2 and three moles of H_2O . Identify the compounds A,B and C write the chemical equation of the reactions involved.



[Watch Video Solution](#)

