



PHYSICS

BOOKS - NCERT EXEMPLAR PHYSICS (HINGLISH)

THE HUMAN EYE AND THE COLOURFUL WORLD

Mcq

1. A person cannot see distinctly object kept beyond 2 m. This defect can be corrected by using a lens of power

A. $+0.5\text{ D}$

B. -0.5 D

C. $+0.2\text{ D}$

D. -0.2 D

Answer: B



View Text Solution

2. A student sitting on the last bench can read the letters written on the blackboard but is not able to read the letters written in his text book. Which of the following statements is correct?

A. The near point of his eyes has receded away

B. The near point of his eyes has come closer to him

C. The far point of his eyes has come closer
to him

D. The far point of his eyes has receded
away

Answer: A



View Text Solution

3. Which of the following statements is correct?

A. A person with myopia can see distant objects clearly

B. A person with hypermetropia can see nearby objects clearly

C. A person with myopia can see nearby objects clearly

D. A person with hypermetropia cannot see distant objects clearly

Answer: C

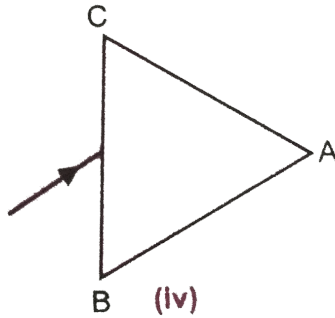
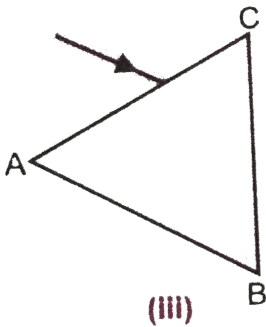
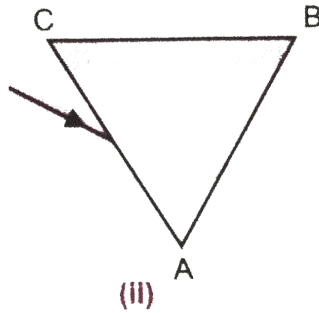
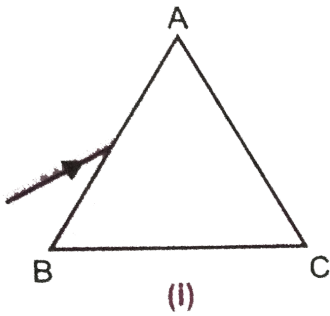


View Text Solution

The Human Eye And The Colourful World

1. A prism ABC (with BC as base) is placed in different orientations. A narrow beam of white light is incident on the prism as shown in (figure 2.21) In which of the following cases, after dispersion, the third colour from the top

corresponds to the colour of the sky ?



Watch Video Solution

2. At noon the sun appears white as

A. light is least scattered

B. all the colours of the white light are scattered away

C. blue colour is scattered the most

D. red colour is scattered the most

Answer: A



Watch Video Solution

3. In the formation of a rainbow light from the sun on water droplets undergoes

A. Reflection, refraction and dispersion

B. Refraction, dispersion and total internal reflection

C. Refraction, dispersion and internal reflection

D. Dispersion, scattering and total internal reflection

Answer: C



Watch Video Solution

4. Twinkling of stars is due to atmospheric

A. dispersion of light by water droplets

B. refraction of light by different layers of varying refractive indices

C. scattering of light by dust particles

D. internal reflection of light by clouds

Answer: B



Watch Video Solution

5. The clear sky appears blue, because

A. blue light gets absorbed in the atmosphere

B. ultraviolet radiations are absorbed in the atmosphere

C. violet and blue lights get scattered more than lights of all other colours by the atmosphere

D. light of all other colours is scattered more than the violet and blue colour

lights by the atmosphere

Answer: C



Watch Video Solution

6. Which of the following statements is correct regarding the propagation of light of different colours of white light in air?

A. Red light moves fastest

B. Blue light moves faster than green light

C. All the colours of the white light move with the same speed

D. Yellow light moves with the mean speed as that of the red and the violet light

Answer: C



Watch Video Solution

7. The danger signals installed at the top of tall buildings are red in colour. These can be

easily seen from a distance because among all other colours, the red light

A. is scattered the most by smoke or fog

B. is scattered the least by smoke or fog

C. is absorbed the most by smoke or fog

D. moves fastest in air

Answer: B



Watch Video Solution

8. Which of the following phenomena contributes significantly to the reddish appearance of the sun at sunrise or sunset?

A. Dispersion of light

B. Scattering of light

C. Total internal reflection of light

D. Reflection of light from the earth

Answer: B



Watch Video Solution

9. The blue colour of the water of the sea is due to :

A. the presence of algae and other plants found in water

B. reflection of sky in water

C. scattering of light by sea particles

D. absorption of light by the sea particles

Answer: C



Watch Video Solution

10. When light rays enter the eye, most of the refraction occurs at the

A. Crystalline lens

B. Outer surface of the cornea

C. Iris

D. Pupil

Answer: B



Watch Video Solution

11. The focal length of the eye lens increases when eye muscles

- A. Are relaxed and lens becomes thinner
- B. Contract and lens becomes thicker
- C. Are relaxed and lens becomes thicker
- D. Contract and lens becomes thinner

Answer: A



Watch Video Solution

12. Draw ray diagrams each showing

(i) myopic eye and

(ii) hypermetropic eye.



Watch Video Solution

13. A student sitting at the back of the classroom cannot read clearly the letters written on the blackboard. What advice will a doctor give to her ? Draw ray diagram for the correction of this defect.



Watch Video Solution

14. How are we able to see nearby and also the distant objects clearly?



Watch Video Solution

15. Nooper needs a lens of power $-4.5D$ for correction of her vision.

(a) What kind of defect in vision is she suffering from ?

(b) What is the focal length and nature of corrective lens ?

(c) Draw ray diagrams showing the defected eye and correction for the defect.

(d) What are the causes of this defect ?



[Watch Video Solution](#)

16. How will you use two indentical prisms so that a narrow beam of white light incident on one prism emerges out of the second prism as white light ? Draw the diagram.



[Watch Video Solution](#)

17. Draw a ray diagram showing the dispersion through a prism when a narrow beam of white light is incident on one of its refracting surface. Also indicate the order of the colours of the spectrum obtained.



Watch Video Solution

18. Is the position of a star as seen by us its true position? Justify your answer.



Watch Video Solution

19. Why do we see a rainbow in the sky only after rainfall?



Watch Video Solution

20. Why does clear sky appear blue ?



Watch Video Solution

21. What is the difference in colours of the sun observed during sunrise/sunset and noon?

Give explanation for each.



[Watch Video Solution](#)

22. Explain the refraction of light through a triangular glass prism using a labelled ray diagram. Hence define the angle of deviation.



[Watch Video Solution](#)

23. How can we explain the reddish appearance of sun at sunrise or sunset? Why

does it not appear red at noon?



[Watch Video Solution](#)

24. Explain the phenomenon of dispersion of white light through a glass prism, using suitable ray diagram.



[Watch Video Solution](#)

25. How does refraction take place in the atmosphere? Why do stars twinkle but not the

planets?



[Watch Video Solution](#)

Long Answer Type Questions

1. Explain the structure and functioning of human eye. How are we able to see nearby as well as distant objects?



[View Text Solution](#)

2. When do we consider a person to be myopic and hypermetropic? Explain using diagrams how the defects associated with myopic and hypermetropic eye can be corrected?



[View Text Solution](#)