



CHEMISTRY

BOOKS - NCERT CHEMISTRY (HINGLISH)

MATTER IN OUR SURROUNDINGS

Matter In Our Surroundings

1. Which one of the following sets of phenomena would increase on raising the

temperature ?

A. Diffusion, evaporation, compression of
gases

B. Evaporation , compression of gases ,
solubility

C. Evaporation, diffusion, expansion of
gases

D. Evaporation, solubility , compression of
gases

Answer: C



Watch Video Solution

2. Seema visited a Natural Gas Compressing Unit and found that the gas can be liquefied under specific conditions of temperature and pressure. While sharing her experience with friends she got confused. Help her to identify the correct set of conditions.

- A. Low temperature, low pressure
- B. High temperature, low pressure
- C. Low temperature, high pressure

D. High temperature, high pressure

Answer: C



Watch Video Solution

3. The property to flow is unique to fluids.

Which one of the following statements is correct ?

A. Only gases behave like fluids

B. Gases and solids behave like fluids

C. Gases and liquids behave like fluids

D. Only liquids are fluids

Answer: C



Watch Video Solution

4. How does the water kept in an earthen pot (mataka) become cool during summer?

A. Diffusion

B. Transpiration

C. osmosis

D. evaporation

Answer: D



Watch Video Solution

5. Arrange the following substances in increasing order of forces of attraction between the particles-water, sugar, oxygen.

A. water, air, wind

B. Air, sugar, oil

C. Oxygen, water, sugar

D. Salt , juice , air

Answer: C



Watch Video Solution

6. On converting $25^{\circ}C$, $38^{\circ}C$ and $66^{\circ}C$ to kelvin scale, the correct sequence of temperature will be

A. 298 K , 311 K and 339 K

B. 298 K , 300 K and 338 K

C. 273 K , 278 K and 543 K

D. 298 K, 310 K , and 338 K

Answer: A



Watch Video Solution

7. Choose the correct statement of the following.

A. Conversion of solid to vapours without passing through the liquid state is called vaporisation.

B. Conversion of vapours into solid without passing through the liquid state is called sublimation.

C. Conversion of vapours into solid without passing through the liquid state is called freezing.

D. Conversion of solid into liquid is called sublimation.

Answer: B



Watch Video Solution

8. The boiling order of boiling points of diethyl ether, acetone and n-butyl alcohol are $35^{\circ}C$, $56^{\circ}C$ and $118^{\circ}C$, respectively. Which one is the following correctly represents their boiling points in kelvin scale ?

A. 306 K , 329 K, 391 K

B. 308 K, 329 K, 392 K

C. 308 K, 329 K, 391 K

D. 329 K, 392 K, 308 K

Answer: C



Watch Video Solution

9. Which condition out of the following will increase the evaporation of water ?

- A. Increases in temperature of water
- B. Decrease in temperature of water
- C. Less exposed surface area of water
- D. Adding common salt to water

Answer: A



Watch Video Solution

10. In which of the following conditions, the distance between the molecules of hydrogen gas would increase ?

- (i) Increasing pressure on hydrogen contained in a closed container.
- (ii) Some hydrogen gas leaking out of the container.
- (iii) Increasing the volume of the container of hydrogen gas .
- (iv) Adding more hydrogen gas to the container without increasing the volume of the container.

A. (i) and (ii)

B. (i) and (iv)

C. (ii) and (iii)

D. (ii) and (iv)

Answer: C



Watch Video Solution

11. A sample of water under supply was found to boil at $102^{\circ}C$ at normal temperature and pressure. Is the water pure ? Will this water freeze at $0^{\circ}C$? Comment.



Watch Video Solution

12. A student heats a beaker containing ice and water. He measures the temperature of the content of the beaker as a function of time. Which of the following would correctly represent the result ? Justify your choice .



Watch Video Solution

13. Fill in the blanks

(a) Evaporation of a liquid at room temperature leads to a effect .

(b) At room temperature the forces of attraction between the particles of solid substances are Than those which exist in the gaseous state.

(c) The arrangement of particles is less ordered in the ... state. However, there is no order in the state.

(d)..... is the change of gaseous state directly to solid state without going through the state.

(e) The phenomenon of changes of a liquid into the gaseous state at any temperature below its boiling point is called



Watch Video Solution

14. Match the physical quantities given in Column A to their SI units given in Column B.

(A)

- (a) Pressure
- (b) Temperature
- (c) Density
- (d) Mass
- (e) Volume

(B)

- (i) cubic metre
- (ii) kilogram
- (iii) pascal
- (iv) kelvin
- (v) kilogram per cubic metre



Watch Video Solution

15. The non-SI and SI units of some physical quantities are given in Column A and Column

B respectively. Match the units belonging to the same physical quantity.



Watch Video Solution

16. Osmosis is a special kind of diffusion'.

Comment.



Watch Video Solution

17. Classify the following into osmosis/diffusion.

(a) Swelling up of a raisin on keeping in water.

(b) Spreading of virus on sneezing.

(c) Earthworm dying on coming in contact with common salt.

(d) Shrinking of grapes kept in thick sugar syrup.

(e) Preserving pickles in salt

(f) Spreading of smell of cake being baked through out the house.

(g) Aquatic animals using oxygen dissolved in water during respiration.



Watch Video Solution

18. Water as ice has a cooling effect, whereas water as steam may cause severe burns. Explain these observations.



Watch Video Solution

19. Alka was making tea in a kettle. Suddenly she felt intense heat from the puff of steam gushing out of the spout of the kettle. She wondered whether the temperature of the steam was higher than that of the water boiling in the kettle . Comment.

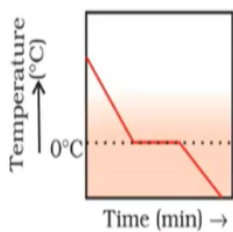


Watch Video Solution

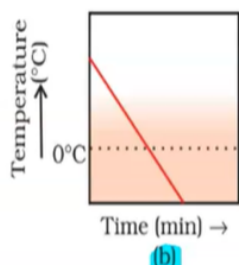
20. A glass tumbler containing hot water is kept in the freezer compartment of a

refrigerator (temperature $< 0^{\circ}C$). If you could measure the temperature of the content of the tumbler, which of the following graphs would correctly represent the change in its temperature as a function of time.

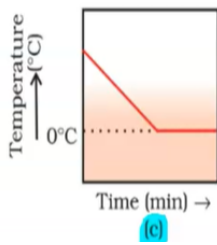
A.



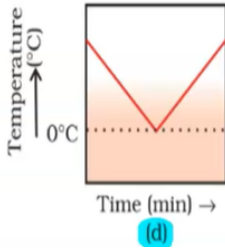
B.



C.



D.



Answer: A



Watch Video Solution

21. Look at the figure and suggest in which of the vessels A, B,C, or D, the rate of evaporation

will be the highest ? Explain.



Watch Video Solution

22. (a) Conversion of solid of vapour is called sublimation . Name the term used to denote the conversion of vapour to solid.

(b) Conversion of solid state to liquid is called fusion, what is meant by latent heat of fusion?



Watch Video Solution

23. You are provided with a mixture of naphthalene and ammonium chloride by your teacher. Suggest an activity to separate them with well labelled diagram



Watch Video Solution

24. It is a hot summer day, Priyanshi and Ali are wearing cotton and nylon clothes respectively. Who do you think would be more comfortable and why ?



Watch Video Solution

25. You want to wear your favourite shirt to a party, but the problem is that it is still will after a wash. What steps would you take to dry it faster ?



Watch Video Solution

26. Comment on the following statements.

(a) Evaporation produces cooling.

(b) Rate of evaporation of an aqueous solution

decreases with increases with increase in humidity .

(c) Sponge though compressible is a solid.



Watch Video Solution

27. Why does the temperature of a substance remain constant during its melting point or boiling point ?



Watch Video Solution