



# PHYSICS

## BOOKS - IE IRODOV PHYSICS (HINGLISH)

### PHYSICAL FUNDAMENTALS OF MECHANICS

**Kinematics**

1. A motorboat going downstream overcome a raft at a point A,  $\tau = 60 \text{ min}$  later it turned back and after some time passed the raft at a distance  $l = 6.0 \text{ km}$  from the point A. Find the flow velocity assuming the duty of the engine to be constant.



[Watch Video Solution](#)

2. A point traversed half the distance with a velocity  $v_0$ . The remaining part of the distance

was covered with velocity  $v_1$  for half the time, and with velocity  $v_2$  for the other half of the time. Find the mean velocity of the point averaged over the whole time of motion.



[Watch Video Solution](#)

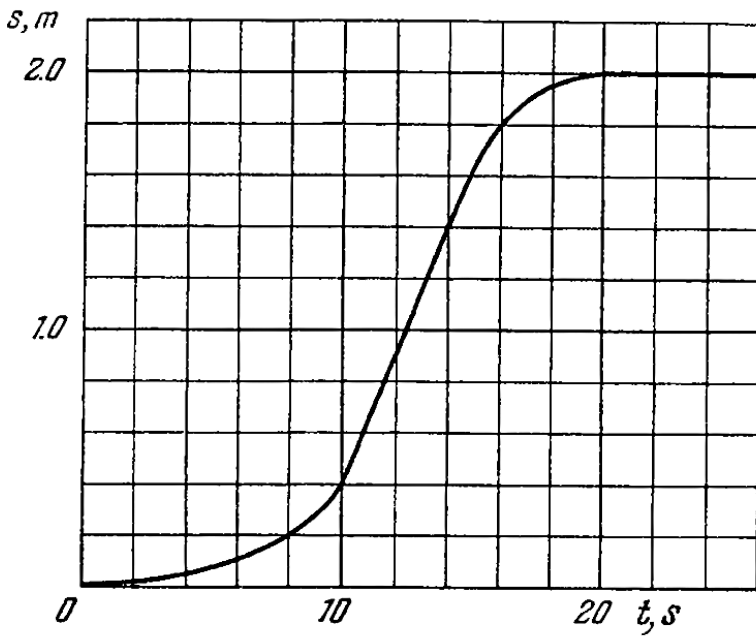
**3.** A car starts moving rectilinearly first with acceleration  $\alpha = 5ms^{-2}$  (the initial velocity is equal to zero), then uniformly, and finally, deceleration at the same rate  $\alpha$  comes to a stop. The time of motion equals  $t = 25s$ . The

average velocity during this time is equal to  $72\text{kmh}^{-1}$  How long does the car move uniformly?



[Watch Video Solution](#)

4. A point moves rectilinearly in one direction.  
Figure shows



the distance  $s$  traversed by the point as a function of the time  $t$ . Using the plot find:

(a) the average velocity of the point during the time of motion,

(b) the maximum velocity,

(c) the time moment  $t_0$  at which the

instantaneous velocity is equal to the mean velocity averaged over the first  $t_0$  seconds.



[Watch Video Solution](#)

5. Two particles, 1 and 2, move with constant velocities  $v_1$  and  $v_2$ . At the initial moment their radius vectors are equal to  $r_1$  and  $r_2$ . How must these four vectors be interrelated for the particles to collide?



[Watch Video Solution](#)

6. A ship moves along the equator to the east with velocity  $v_0 = 30\text{km} / \text{hour}$ . The southeastern wind blows at an angle  $\varphi = 60^\circ$  to the equator with velocity  $v = 15\text{km} / \text{hour}$ . Find the wind velocity  $v'$  relative to the ship and the angle of  $\varphi'$  between the equator and the wind direction in the reference frame fixed to the ship.



[Watch Video Solution](#)

7. Two swimmers leave point A on the bank of the river to reach point B lying right across on the other bank. One of them crosses the river along the straight line AB while the other swims at right angles to the stream and then walks the distance that he has been carried away by the stream to get to point B. What was the velocity  $u$  of his walking if both swimmers reached the destination simultaneously? The stream velocity  $v_0 = 2.0 \text{ km / hour}$  and the velocity  $v'$  of each



swimmer with respect to water equals to  $2.5\text{km}$  per hour.



[Watch Video Solution](#)

**8.** Two boats, A and B, move away from a buoy anchored at the middle of a river along the mutually perpendicular straight lines: the boat A along the river, and the boat B across the river. Having moved off an equal distance from the buoy the boats returned. Find the ratio of times of motion of boats  $\tau_A / \tau_B$  if the velocity

of each boat with respect to water is  $\eta = 1.2$  times greater than the stream velocity.



[Watch Video Solution](#)

9. A boat moves relative to water with a velocity which is  $n = 2.0$  times less than the river flow velocity. At what angle to the stream direction must the boat move to minimize drifting?



[Watch Video Solution](#)

**10.** Two bodies were thrown simultaneously from the same point, one, straight up, and the other, at an angle of  $\theta = 60^\circ$  to the horizontal. The initial velocity of each body is equal to  $v_0 = 25\text{m/s}$ . Neglecting the air drag, find the distance between the bodies  $t = 1.70\text{s}$  later.



**Watch Video Solution**

**11.** Two particles move in a uniform gravitational field with an acceleration  $g$ . At

the initial moment the particles were located over a tower at one point and moved with velocities  $v_1 = 3m/s$  and  $v_2 = 4m/s$  horizontally in opposite directions. Find the distance between the particles at the moment when their velocity vectors become mutually perpendicular.



[Watch Video Solution](#)

**12.** Three particles A, B and C are situated at the vertices of an equilateral triangle ABC of

side  $d$  at time  $t = 0$ . Each of the particles moves with constant speed  $v$ . A always has its velocity along  $AB$ , B along  $BC$  and C along  $CA$ . At what time will the particles meet each other?



[Watch Video Solution](#)

**13.** Point A moves uniformly with velocity  $\nu$  so that the vector  $\nu$  is continually "aimed" at point B which in its turn moves rectilinearly and uniformly with velocity  $v < \nu$ . At the

initial moment of time  $v \perp u$  and the points are separated by a distance  $l$ . How soon will the points converge?



[Watch Video Solution](#)

**14.** A train of length  $l = 350m$  starts moving rectilinearly with constant acceleration  $w = 3.0 \cdot 10^{-2}m/s^2$ ,  $t = 30s$  after the start the locomotive headlight is switched on (event 1), and  $\tau = 60s$  after that event the tail signal light is switched on (event 2). Find the

distance between these events in the reference frames fixed to be train and to the Earth. How and at what constant velocity  $V$  relative to the Earth must a certain reference frame  $K$  move for the two events to occur in it at the same point?



[Watch Video Solution](#)

**15.** An elevator car whose floor to ceiling distance is equal to  $2.7m$  starts ascending with constant acceleration  $1.2m/s^2$ . 2 s after

the start, a bolt begins falling from the ceiling of the car. Find

(a) the time after which bolt hits the floor of the elevator.

(b) the net displacement and distance travelled by the bolt, with respect to earth. (Take  $g = 9.8m / s^2$ )



[Watch Video Solution](#)

**16.** Two particles, 1 and 2, move with constant velocities  $v_1$  and  $v_2$  along two mutually



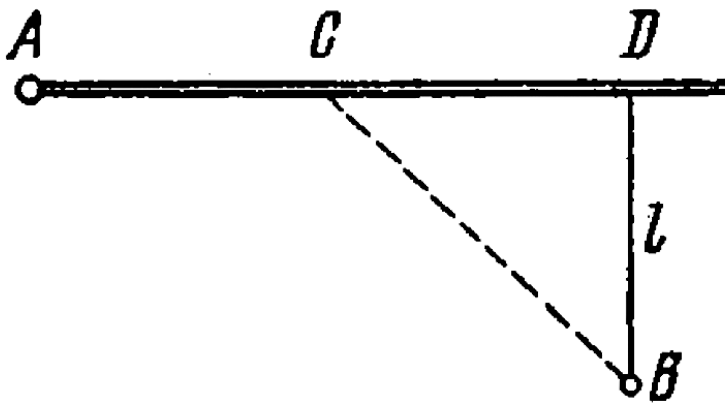
perpendicular straight lines toward the intersection point O. At the moment  $t = 0$  the particles were located at the distances  $l_1$  and  $l_2$  from the point O. How soon will the distance between the particles become the smallest? What is it equal to?



[Watch Video Solution](#)

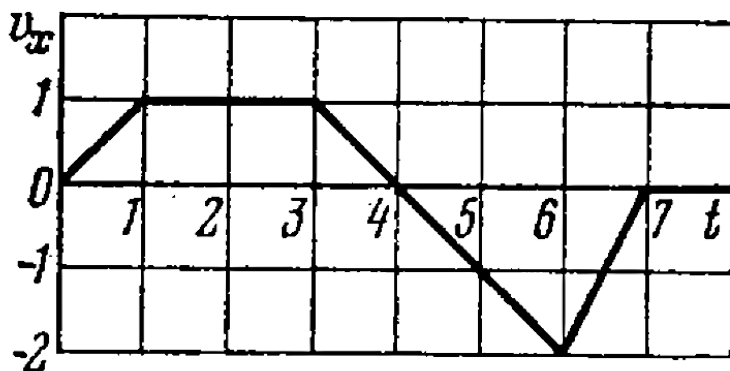
**17.** From point A located on a highway (figure) one has to get by car as soon as possible to point B located in the field at a distance  $l$  from

the highway. It is known that the car moves in the field  $\eta$  times slower than on the highway. At what distance from point D one must turn off the highway?



Watch Video Solution

18. A point travels along the  $x$  axis with a velocity whose projection  $v_x$  is presented as a function of time by the plot in figure.



Assuming the coordinate of the point  $x = 0$  at the moment  $t = 0$ , draw the approximate

time dependence plots for the acceleration  $w_x$ , the x coordinate, and the distance covered  $s$ .



**Watch Video Solution**

**19.** A point traversed half a circle of radius  $R = 160\text{cm}$  during time interval  $\tau = 10.0\text{s}$ . Calculate the following quantities averaged over that time:

(a) the mean velocity  $\langle \langle v \rangle \rangle$ ,

(b) the modulus of the mean velocity vector

$|\langle \langle v \rangle \rangle|$ ,

(c) the modulus of the mean vector of the total acceleration  $|\langle w \rangle|$  if the point moved with constant tangent acceleration.



[View Text Solution](#)

**20.** A radius vector of a particle varies with time  $t$  as  $r = at(1 - \alpha t)$ , where  $a$  is a constant vector and  $\alpha$  is a positive factor. Find:

(a) the velocity  $v$  and the acceleration  $w$  of the

particles as functions of time,

(b) the time interval  $\Delta t$  taken by the particle to return to the initial points, and the distance  $s$  covered during that time.



[Watch Video Solution](#)

**21.** At the moment  $t = 0$  a particle leaves the origin and moves in the positive direction of the  $x$ -axis. Its velocity varies with time as  $v = v_0(1 - t/\tau)$ , where  $v_0$  is the initial velocity vector whose modulus equals

$v_0 = 10.0\text{cm/s}$ ,  $\tau = 5.0\text{s}$ . Find:

- (a) the  $x$  coordinate of the particle at the moments of time 6.0, 10, and 20s,
- (b) the moments of time when the particles is at the distance  $10.0\text{cm}$  from the origion,
- (c) the distance  $s$  covered by the particle during the first 4.0 and 8.0s, draw the approximate plot  $s(t)$ .



**Watch Video Solution**

22. The velocity of a particle moving in the positive direction of the  $x$  axis varies as  $v = \alpha\sqrt{x}$ , where  $\alpha$  is a positive constant.

Assuming that at the moment  $t = 0$  the particle was located at the point  $x = 0$ , find:

(a) the time dependence of the velocity and the acceleration of the particle,

(b) the mean velocity of the particle averaged over the time that the particle takes to cover the first  $s$  metres of the path.



**Watch Video Solution**



23. A point moves rectilinearly with deceleration whose modulus depends on the velocity  $v$  of the particle as  $w = a\sqrt{v}$ , where  $a$  is a positive constant. At the initial moment the velocity of the point is equal to  $v_0$ . What distance will it traverse before it stops? What time will it take to cover that distance?



**Watch Video Solution**

24. A radius vector of a point A relative to the origin varies with time  $t$  as  $r = at\mathbf{i} - bt^2\mathbf{j}$ , where  $a$  and  $b$  are positive constants, and  $\mathbf{i}$  and  $\mathbf{j}$  are the unit vectors of the  $x$  and  $y$  axes.

Find:

(a) the equation of the point's trajectory  $y(x)$ , plot this function,

(b) the time dependence of the velocity  $\mathbf{v}$  and acceleration  $\mathbf{w}$  vectors, as well as of the moduli of these quantities,

(c) the time dependence of the angle  $\alpha$  between the vectors  $\mathbf{w}$  and  $\mathbf{v}$ ,

(d) the mean velocity vector averaged over the first  $t$  seconds of motion, and the modulus of this vector.



[Watch Video Solution](#)

**25.** A point moves in the plane  $xy$  according to the law  $x = at$ ,  $y = at(1 - \alpha t)$ , where  $a$  and  $\alpha$  are positive constants, and  $t$  is time. Find:

(a) the equation of the point's trajectory  $y(x)$ , plot this function,

(b) the velocity  $v$  and the acceleration  $w$  of the

point as functions of time,

(c) the moment  $t_0$  at which the velocity vector forms an angle  $\pi/4$  with the acceleration vector.



[Watch Video Solution](#)

**26.** A point moves in the plane  $xy$  according to the law  $x = a \sin \omega t$ ,  $y = a(1 - \cos \omega t)$ , where  $a$  and  $\omega$  are positive constants. Find:

(a) the distance  $s$  traversed by the point during the time  $\tau$ ,

(b) the angle between the point's velocity and acceleration vectors.



[Watch Video Solution](#)

27. A particle moves in the  $xy$ -plane with constant acceleration  $a$  directed along the negative  $y$ -axis. The equation of path of the particle has the form  $y = bx - cx^2$ , where  $b$  and  $c$  are positive constants. Find the velocity of the particle at the origin of coordinates.



[Watch Video Solution](#)

**28.** A small body is thrown at an angle to the horizontal with the initial velocity  $v_0$ .

Neglecting the air drag, find:

(a) the displacement of the body as a function of time  $r(t)$ ,

(b) the mean velocity vector  $\langle \langle v \rangle \rangle$  averaged over the first  $t$  seconds and over the total time of motion.



**Watch Video Solution**

**29.** A body is thrown from the surface of the Earth at an angle  $\alpha$  to the horizontal with the initial velocity  $v_0$ . Assuming the air drag to be negligible, find:

(a) the time of motion,

(b) the maximum height of ascent and the horizontal range, at what value of the angle  $\alpha$  they will be equal to each other,

(c) the equation of trajectory  $y(x)$ , where  $y$  and  $x$  are displacements of the body along the vertical and the horizontal respectively,

(d) the curvature radii of trajectory at its initial point and at its peak.



[Watch Video Solution](#)

**30.** Using the conditions of the foregoing problem, draw the approximate time dependence of moduli of the normal  $w_n$  and tangent  $w_\tau$  acceleration vectors, as well as of the projection of the total acceleration vector  $w_v$  on the velocity vector direction.



[View Text Solution](#)



**31.** A ball starts falling with zero initial velocity on a smooth inclined plane forming an angle  $\alpha$  with the horizontal. Having fallen the distance  $h$ , the ball rebounds elastically off the inclined plane. At what distance from the impact point will the ball rebound for the second time?



**Watch Video Solution**

**32.** A cannon and a target are  $5.10\text{km}$  apart and located at the same level. How soon will the shell launched with the initial velocity  $240\text{m/s}$  reach the target in the absence of air drag?



**Watch Video Solution**

**33.** A cannon fires successively two shells with velocity  $v_0 = 250\text{m/s}$ , the first at the angle  $\theta_1 = 60^\circ$  and the second at the angle

$\theta_2 = 45^\circ$  to the horizontal, the azimuth being the same. Neglecting the air drag, find the time interval between firings leading to the collision of the shells.



[Watch Video Solution](#)

**34.** A balloon starts rising from the surface of the Earth. The ascension rate is constant and equal to  $v_0$ . Due to the wind the balloon



[Watch Video Solution](#)

**35.** A particle moves in the plane  $xy$  with velocity  $v = ai + bxj$ , where  $i$  and  $j$  are the unit vectors of the  $x$  and  $y$  axes, and  $a$  and  $b$  are constants. At the initial moment of time the particle was located at the point  $x = y = 0$ . Find:

(a) the equation of the particle's trajectory  $y(x)$ ,


(b) the curvature radius of trajectory as a function of  $x$ .



**Watch Video Solution**

**36.** A particle A moves in one direction along a given trajectory with a tangential acceleration  $w_\tau = a\tau$ , where  $a$  is a constant vector coinciding in direction with the  $x$  axis (figure), and  $\tau$  is a unit vector coinciding in direction with the velocity vector at a given point. Find how the velocity of the particle depends on  $x$  provided that its velocity is negligible at the

point  $x = 0$ .



[View Text Solution](#)

**37.** A point moves along a circle with a speed

$$v = kt, \text{ where } k = 0.5 \text{ m/s}^2$$

Find the total acceleration of the point the moment when it has covered the  $n^{\text{th}}$  fraction of the circle after the beginning of motion,

$$\text{where } n = \frac{1}{10}.$$



**Watch Video Solution**

**38.** A point moves with deceleration along the circle of radius  $R$  so that at any moment of

time its tangential and normal accelerations are equal in moduli. At the initial moment  $t = 0$  the velocity of the point equals  $v_0$ . Find:

(a) the velocity of the point as a function of time and as a function of the distance covered

$s_1$ ,

(b) the total acceleration of the point as a function of velocity and the distance covered.



**Watch Video Solution**



**39.** A point moves along an arc of a circle of radius  $R$ . Its velocity depends on the distance covered  $s$  as  $v = \sqrt{s}$ , where  $a$  is a constant. Find the angle  $\alpha$  between the vector of the total acceleration and the vector of velocity as a function of  $s$ .



**Watch Video Solution**

**40.** A particle moves along an arc of a circle of radius  $R$  according to the law  $l = a \sin \omega t$ ,

where  $l$  is the displacement from the initial position measured along the arc, and  $a$  and  $\omega$  are constants. Assuming  $R = 1.00m$ ,  $a = 0.80m$ , and  $\omega = 2.00rad/s$ , find:

(a) the magnitude of the total acceleration of the particle at the points  $l = 0$  and  $l = \pm a$ ,

(b) the minimum value of the total acceleration  $w_{\min}$  and the corresponding displacement  $l_m$ .



**Watch Video Solution**

**41.** A point moves in the plane so that its tangential acceleration  $w_\tau = a$ , and its normal acceleration  $w_n = bt^4$ , where  $a$  and  $b$  are positive constants, and  $t$  is time. At the moment  $t = 0$  the point was at rest. Find how the curvature radius  $R$  of the point's trajectory and the total acceleration  $w$  depend on the distance covered  $s$ .



**Watch Video Solution**

**42.** A particle moves along the plane trajectory  $y(x)$  with velocity  $v$  whose modulus is constant. Find the acceleration of the particle at the point  $x = 0$  and the curvature radius of the trajectory at that point if the trajectory has the form

(a) of a parabola  $y = ax^2$ ,

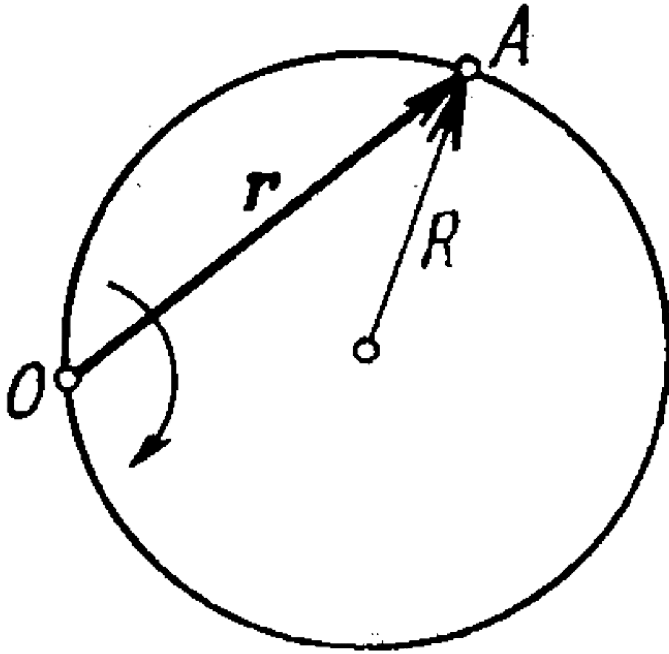
(b) of an ellipse  $(x/a)^2 + (y/b)^2 = 1$ ,  $a$  and  $b$  are constants here.



**View Text Solution**

**43.** A particle A moves along a circle of radius  $R = 50\text{cm}$  so that its radius vector  $r$  relative to the point O (figure) rotates with the constant angular velocity  $\omega = 0.40\text{rad/s}$ . Find the modulus of the velocity of the particle, and the modulus and direction of its

total acceleration.



[Watch Video Solution](#)

**44.** A wheel rotates around a stationary axis so that the rotation angle  $\theta$  varies with time as  $\theta = at^2$  where  $a = 0.2\text{rad}/\text{s}^2$ . Find the magnitude of net acceleration of the point A at the rim at the moment  $t = 2.5\text{s}$  if the linear velocity of the point A at this moment is  $v = 0.65\text{m}/\text{s}$ .



**Watch Video Solution**

**45.** A shell acquires the initial velocity  $v = 320\text{m/s}$ , having made  $n = 2.0$  turns inside the barrel whose length is equal to  $l = 2.0\text{m}$ . Assuming that the shell moves inside the barrel with a uniform acceleration, find the angular velocity of its axial rotation at the moment when the shell escapes the barrel.



**Watch Video Solution**



**46.** A solid body rotates about a stationary axis according to the law  $\theta = 6t - 2t^3$ . Here  $\theta$ , is in radian and  $t$  in seconds. Find

(a). The mean values of the angular velocity and angular acceleration averaged over the time interval between  $t = 0$  and the complete stop.

(b). The angular acceleration at the moment when the body stops.

Hint: if  $y = y(t)$ , then mean/average value of  $y$  between  $t_1$  and  $t_2$  is

$$\langle y \rangle = \left( \int_{t_1}^{t_2} y(t) dt \right) \frac{1}{t_2 - t_1}$$



[Watch Video Solution](#)

47. A solid body starts rotating about a stationary axis with an angular acceleration  $\alpha = (2.0 \times 10^{-2}) \text{ rad/s}^2$  here  $t$  is in seconds. How soon after the beginning of rotation will the total acceleration vector of an arbitrary point of the body form an angle  $\theta = 60^\circ$  with its velocity vector?



[Watch Video Solution](#)

**48.** A solid body rotates with deceleration about a stationary axis with an angular deceleration  $\beta \propto \sqrt{\omega}$ , where  $\omega$  is its angular velocity. Find the mean angular velocity of the body averaged over the whole time of rotation if at the initial moment of time its angular velocity was equal to  $\omega_0$ .



**Watch Video Solution**

**49.** A solid body rotates about a stationary axis so that its angular velocity depends on

the rotation angle  $\varphi$  as  $\omega = \omega_0 - a\varphi$ , where  $\omega_0$  and  $a$  are positive constants. At the moment  $t = 0$  the angle  $\varphi = 0$ . Find the time dependence of

(a) the rotation angle,

(b) the angular velocity.



[Watch Video Solution](#)

**50.** A solid body starts rotating about a stationary axis with an angular acceleration  $\beta = \beta_0 \cos \varphi$ , where  $\beta_0$  is a constant vector

and  $\varphi$  is an angle of rotation from the initial position. Find the angular velocity of the body as a function of the angle  $\varphi$ . Draw the plot of this dependence.

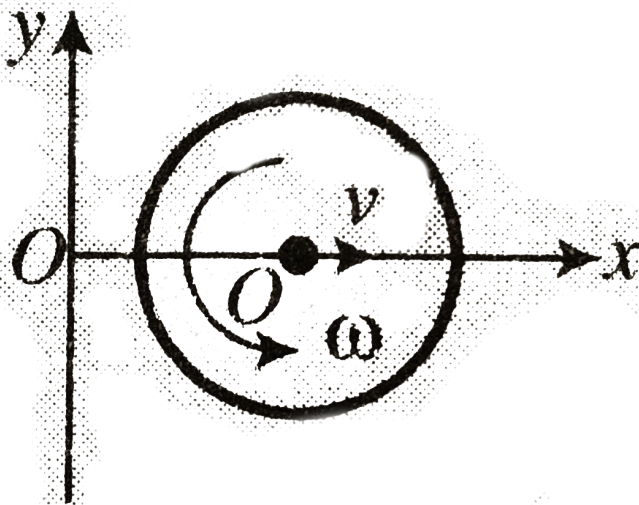


[Watch Video Solution](#)

**51.** A rotating disc moves in the positive direction of  $x$ -axis as shown. Find the equation  $y(x)$  describing the position of the instantaneous axis of rotation if at the initial moment the centre  $C$  of the disc was located

at origin after which (a) it moved with constant acceleration  $a$  (initial velocity zero) while the disc rotating anticlockwise with constant angular velocity  $\omega$ . (b) it moved with constant velocity  $v$  while the disc started rotating anticlockwise with a constant angular acceleration  $a$  (with initial angular velocity

zero).



[Watch Video Solution](#)

52. A point A is located on the rim of a wheel of radius  $R = 0.50m$  which rolls without slipping along a horizontal surface with

velocity  $v = 1.00\text{m} / \text{s}$ . Find:

(a) the modulus and the direction of the acceleration vector of the point A,

(b) the total distance  $s$  traversed by the point A between the two successive moments at which it touches the surface.



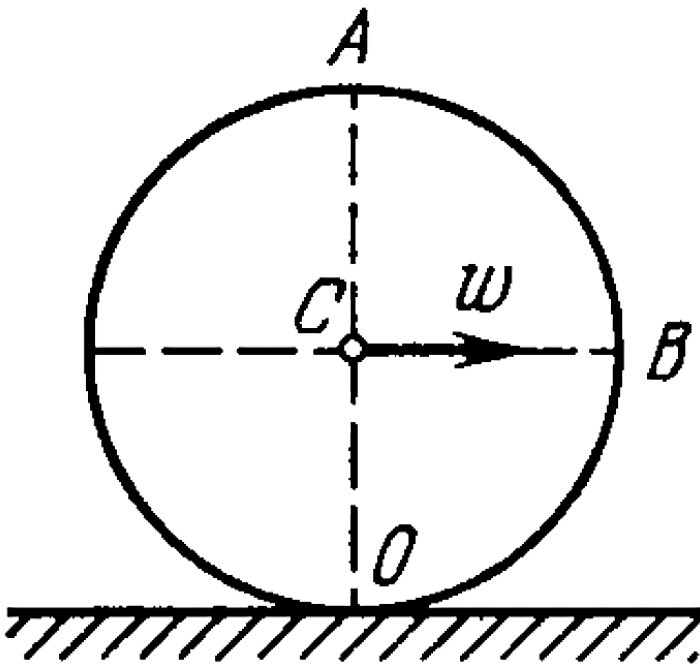
[Watch Video Solution](#)

**53.** A ball of radius  $R = 10.0\text{cm}$  rolls without slipping down an inclined plane so that its centre moves with constant acceleration



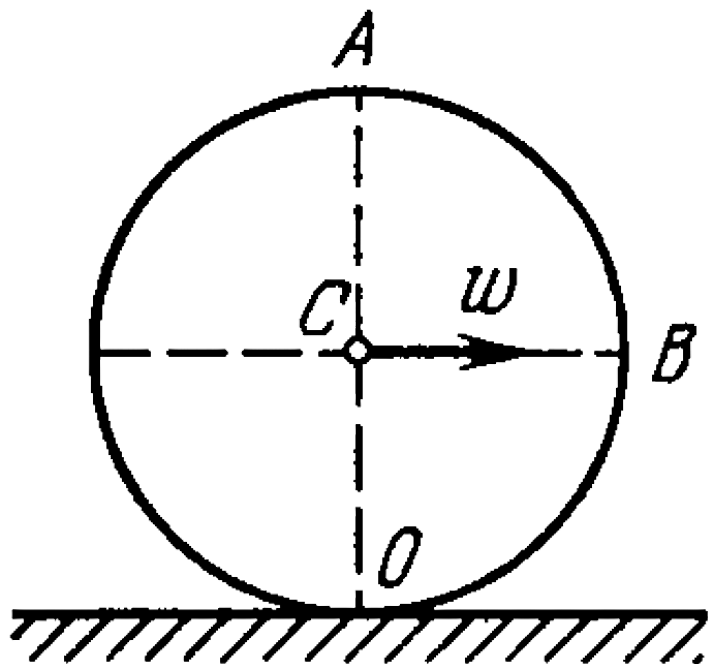
$w = 2.50\text{cm} / \text{s}^2$ ,  $t = 2.00\text{s}$  after the beginning of motion its position corresponds to that shown in figure. Find:

- (a) the velocities of the points A, B, and O,
- (b) the accelerations of these points.



**54.** A cylinder rolls without slipping over a horizontal plane. The radius of the cylinder is equal to  $r$ . Find the curvature radii of trajectories traced out by the points A and

B(see figure)



[View Text Solution](#)

**55.** Two solid bodies rotate about stationary mutually perpendicular intersecting axes with constant angular velocities  $\omega_1 = 3.0\text{rad/s}$  and  $\omega_2 = 4.0\text{rad/s}$ . Find the angular velocity and angular acceleration of one body relative to the other.



**View Text Solution**

**56.** A solid body rotates with angular velocity

$$\omega = at\mathbf{i} + bt^2\mathbf{j}, \quad \text{where} \quad a = 0.50\text{rad/s}^2,$$

$b = 0.060 \text{ rad/s}^3$ , and  $i$  and  $j$  are the unit vectors of the  $x$  and  $y$  axes. Find:

(a) the moduli of the angular velocity and the angular acceleration at the moment  $t = 10.0 \text{ s}$

,

(b) the angle between the vectors of the angular velocity and the angular acceleration at that moment.



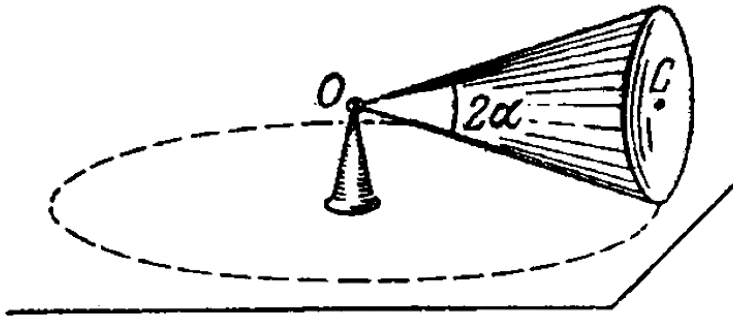
**Watch Video Solution**

57. A round cone with half-angle  $\alpha = 30^\circ$  and the radius of the base  $R = 5.0\text{cm}$  rolls uniformly and without slipping over a horizontal plane as shown in figure. The cone apex is hinged at the point O which is on the same level with the point C, the cone base centre. The velocity of point C is  $v = 10.0\text{cm} / \text{s}$ . Find the moduli of

(a) the vector of the angular velocity of the cone and the angle it forms with the vertical,

(b) the vector of the angular acceleration of

the cone.



[View Text Solution](#)

**58.** A solid body rotates with a constant angular velocity  $\omega_0 = 0.50 \text{ rad/s}$  about a horizontal axis AB. At the moment  $t = 0$  the axis AB starts turning about the vertical with a constant angular acceleration  $\beta_0 = 0.10 \text{ rad/s}^2$ . Find the angular velocity and angular acceleration of the body after  $t = 3.5 \text{ s}$ .



[View Text Solution](#)



1. An aerostat of mass  $m$  starts coming down with a constant acceleration  $w$ . Determine the ballast mass to be dumped for the aerostat to reach the upward acceleration of the same magnitude. The air drag is to be neglected.

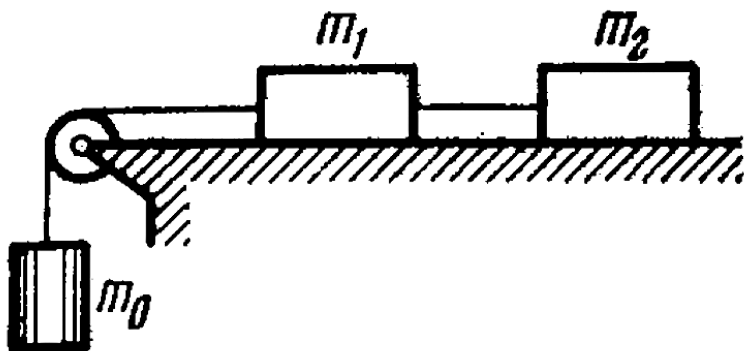


[Watch Video Solution](#)

2. In the arrangement of figure the masses  $m_0$ ,  $m_1$ , and  $m_2$  of bodies are equal, the masses of the pulley and the threads are negligible, and

there is no friction in the pulley. Find the acceleration  $w$  with which the body  $m_0$  comes down, and the tension of the thread binding together the bodies  $m_1$  and  $m_2$ , if the coefficient of friction between these bodies and the horizontal surface is equal to  $k$ .

Consider possible cases.



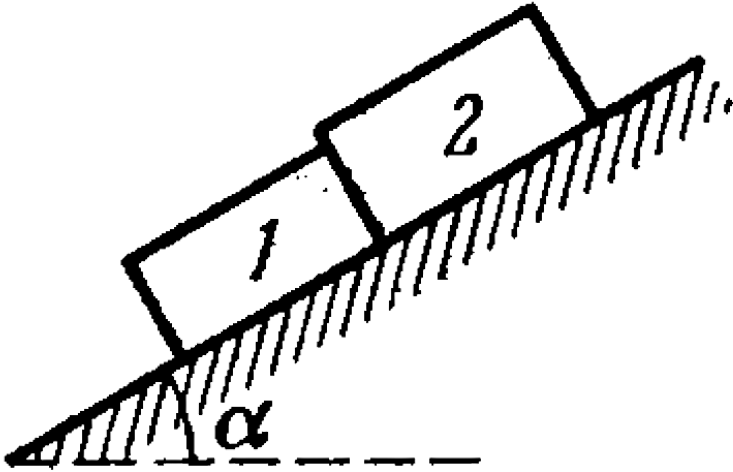
[Watch Video Solution](#)

3. Two touching bars 1 and 2 are placed on an inclined plane forming an angle  $\alpha$  with the horizontal (figure). The masses of the bars are equal to  $m_1$  and  $m_2$ , and the coefficients of friction between the inclined plane and these bars are equal to  $k_1$  and  $k_2$  respectively, with  $k_1 > k_2$ . Find:

(a) the force of interaction of the bars in the process of motion,

(b) the minimum value of the angle  $\alpha$  at which

at bars start sliding down.



**Watch Video Solution**

4. A small body was launched up an inclined plane set at an angle  $\alpha = 15^\circ$  against the horizontal. Find the coefficient of friction, if the time of the ascent of the body is  $\eta = 2.0$  times less than the time of its descent.



[Watch Video Solution](#)

5. The following parameters of the arrangement of figure are available: the angle  $\alpha$  which the inclined plane forms with the

horizontal, and the coefficient of friction  $k$  between the body  $m_1$  and the inclined plane.

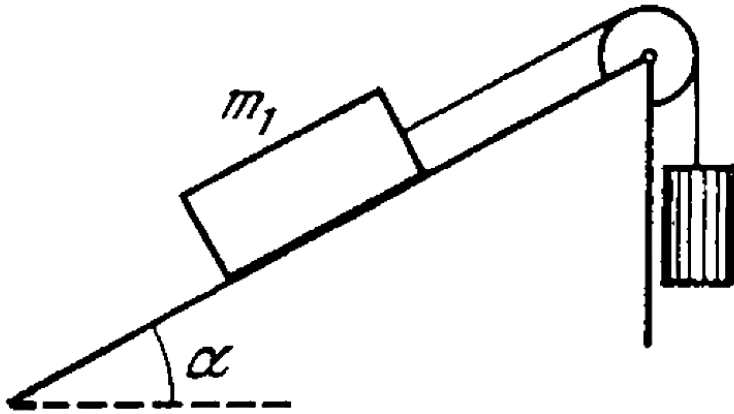
The masses of the pulley and the threads, as well as the friction in the pulley, are negligible.

Assuming both bodies to be motionless at the initial moment, find the mass ratio  $m_2 / m_1$  at which the body  $m_2$

(a) starts coming down,

(b) starts going up,

(c) is at rest.

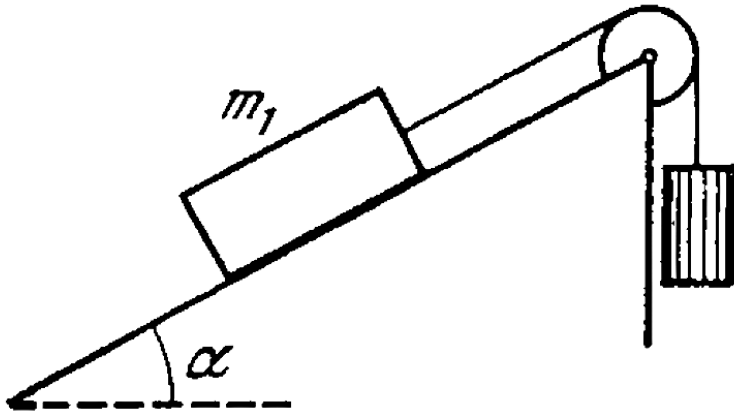


[Watch Video Solution](#)



6. The inclined plane of figure forms an angle  $\alpha = 30^\circ$  with the horizontal. The mass ratio  $m_2/m_1 = \eta = 2/3$ . The coefficients of friction between the body  $m_1$  and the inclined plane is equal to  $k = 0.10$ . The masses of the pulley and the threads are negligible. Find the magnitude and the direction of acceleration of the body  $m_2$  when the formely stationary

system of masses starts moving.



[Watch Video Solution](#)

7. A plank of mass  $m_1$  with a bar of mass  $m_2$  placed on it lies on a smooth horizontal plane.

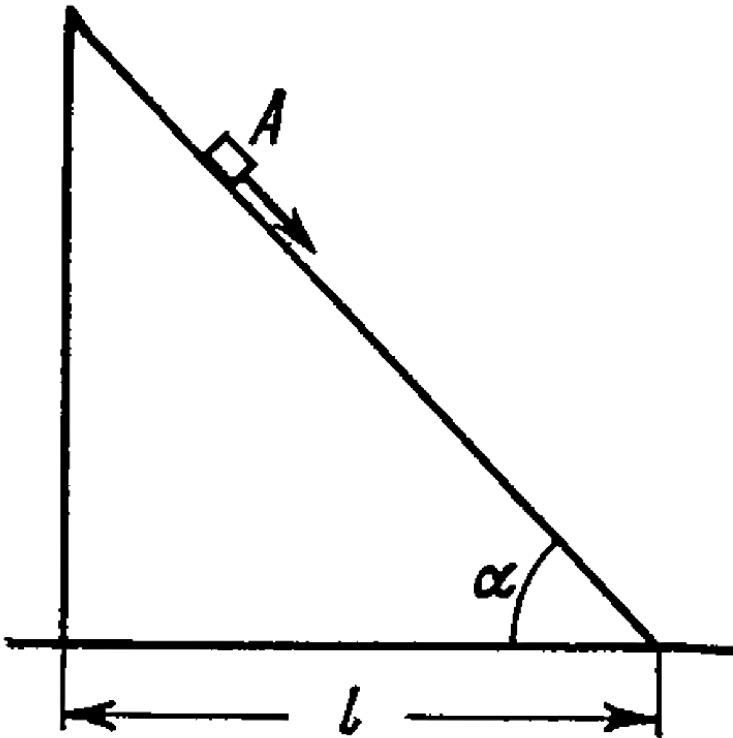
A horizontal force growing with time  $t$  as  $F' = at$  ( $a$  is constant) is applied to the bar.

Find how the accelerations of the plank  $w_1$  and of the bar  $w_2$  depend on  $t$ , if the coefficient of friction between the plank and the bar is equal to  $k$ . Draw the approximate plots of these dependences.



[Watch Video Solution](#)

8. A small body A starts sliding down from the top of a wedge (figure) whose base is equal to  $l = 2.10m$ . The coefficient of friction between the body and the wedge surface is  $k = 0.140$ . At what value of the angle  $\alpha$  will the time of sliding be the least? What will it be equal to?

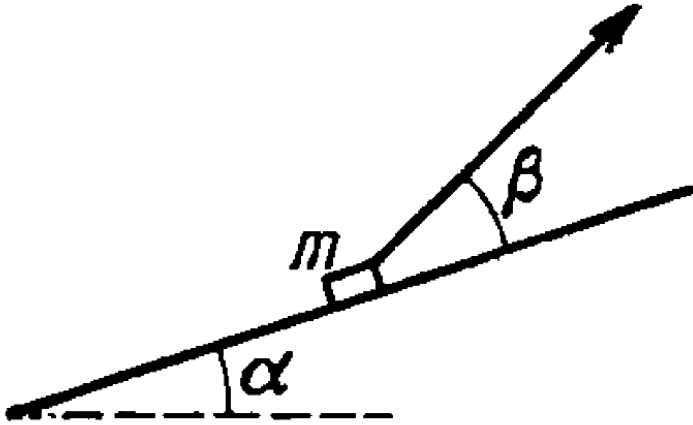




Watch Video Solution

9. A bar of mass  $m$  is pulled by means of a thread up an inclined plane forming an angle  $\alpha$  with the horizontal (figure). The coefficient of friction is equal to  $k$ . Find the angle  $\beta$  which is thread must form with the inclined plane for the tension of the thread to be minimum.

What is it equal to?



Watch Video Solution

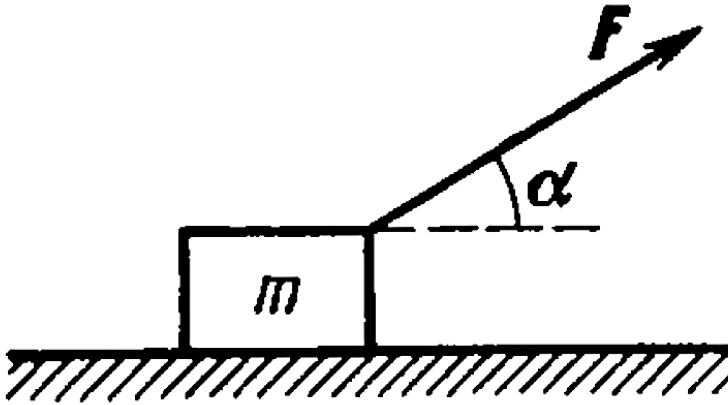
**10.** At the moment  $t = 0$  the force  $F = at$  is applied to a small body of mass  $m$  resting on a smooth horizontal plane ( $a$  is constant).

The permanent direction of this force forms an angle  $\alpha$  with the horizontal (figure). Find:

(a) the velocity of the body at the moment of its breaking off the plane,

(b) the distance traversed by the body up to

this moment.



**Watch Video Solution**



11. A bar of mass  $m$  resting on a smooth horizontal plane starts moving due to the force  $F = mg/3$  of constant magnitude. In the process of its rectilinear motion the angle  $\alpha$  between the direction of this force and the horizontal varies as  $\alpha = as$ , where  $a$  is a constant, and  $s$  is the distance traversed by the bar from its initial position. Find the velocity of the bar as a function of the angle  $\alpha$ .



**Watch Video Solution**

12. A horizontal plane with the coefficient of friction  $k$  supports two bodies: a bar and an electric motor with a battery on a block. A thread attached to the bar is wound on the shaft of the electric motor. The distance between the bar and the electric motor is equal to  $l$ . When the motor is switched on, the bar, whose mass is twice as great as that of the other body, starts moving with a constant acceleration  $w$ . How soon will the bodies collide?



**Watch Video Solution**

**13.** A pulley fixed to the ceiling of an elevator car carries a thread whose ends are attached to the loads of masses  $m_1$  and  $m_2$ . The car starts going up with an acceleration  $w_0$ . Assuming the masses of the pulley and the thread, as well as the friction, to be negligible find:

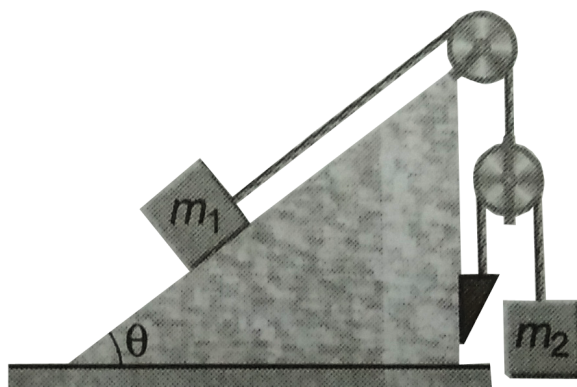
- (a) the acceleration of the load  $m_1$  relative to the elevator shaft and relative to the car,
- (b) the force exerted by the pulley on the ceiling of the car.



**Watch Video Solution**

**14.** Find the acceleration of the body of mass  $m_2$  in the arrangement shown in figure. If the mass  $m_2$  is  $\eta$  time great as the mass  $m_1$  and the angle that the inclined plane forms with the horizontal is equal to  $\theta$ . The masses of the pulley and threads, as well as the friction, are

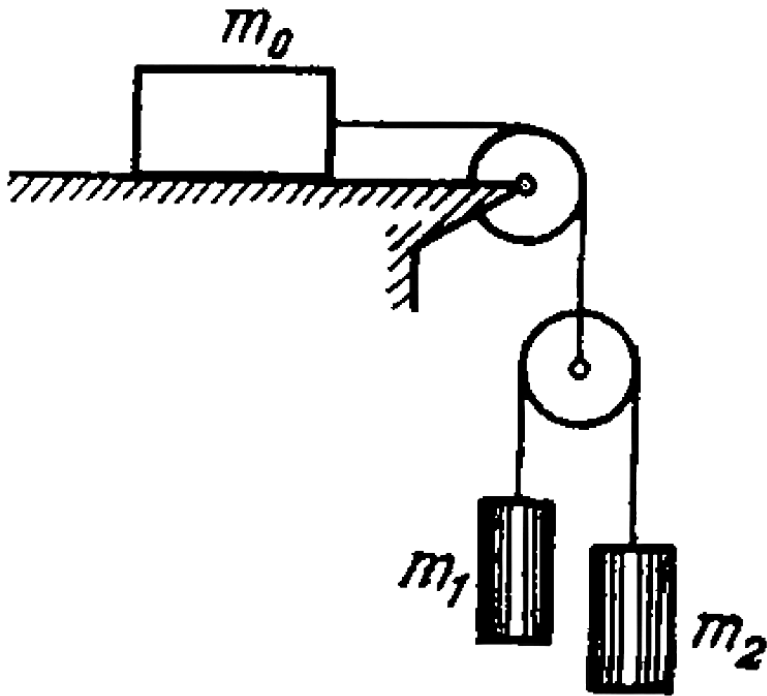
assumed to be negligible.



[Watch Video Solution](#)

**15.** In the arrangement shown in figure the bodies have masses  $m_0, m_1, m_2$ , the friction is absent, the masses of the pulleys and the threads are negligible. Find the acceleration of

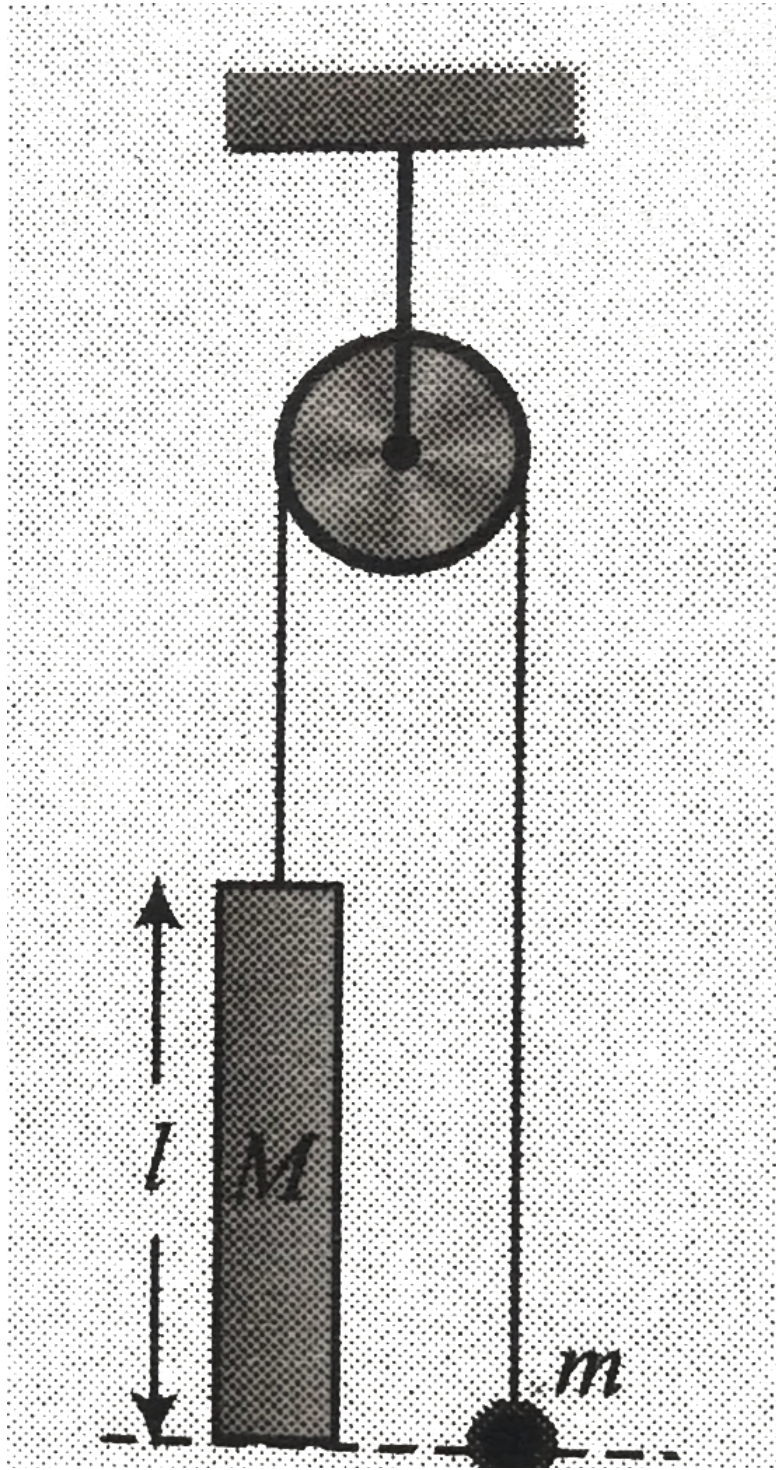
the body  $m_1$ . Look into possible cases.




[Watch Video Solution](#)

**16.** In the arrangement shown in fig., mass of the rod  $M$  exceeds the mass  $m$  of the ball. The ball has an opening permitting it to slide along the thread with some friction. The mass of the pulley and the friction in its axle are negligible. At the initial moment, the ball was located opposite the lower end of the rod. When set free, both bodies began moving with constant accelerations. Find the friction force between the ball and the thread if  $t$  seconds after the beginning of motion, the ball got opposite to the upper end of the rod. The rod

length equals  $l$ .








Watch Video Solution

17. In the arrangement shown in figure the mass of the ball is  $\eta$  times as that of the rod. The length of the rod is  $L$  the masses of the pulleys and the threads as well as the friction,

are negligible. The ball is set on the same level as the lower end of the rod and then released. How soon will the ball be opposite the upper

and of the rod?

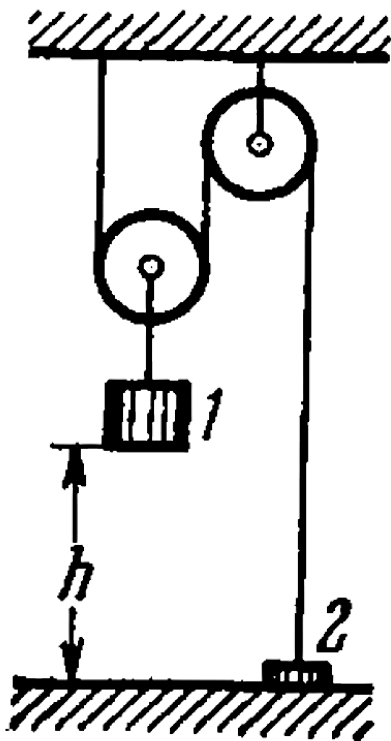




Watch Video Solution

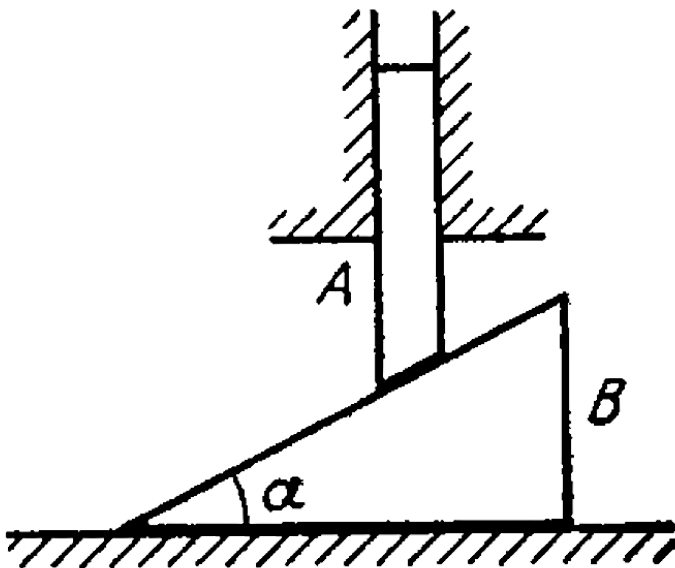
**18.** In the arrangement shown in figure the mass of body 1 is  $\eta = 4.0$  times as great as that of body 2. The height  $h = 20\text{cm}$ . The masses of the pulleys and the threads, as well as the friction, are negligible. At a certain moment body 2 is released and the arrangement set in motion. What is the

maximum height that body 2 will go up to?



Watch Video Solution

19. Find the accelerations of rod A and wedge B in the arrangement shown in figure if the ratio of the mass of the wedge to that of the rod equals  $\eta$ , and the friction between all contact surfaces is negligible.

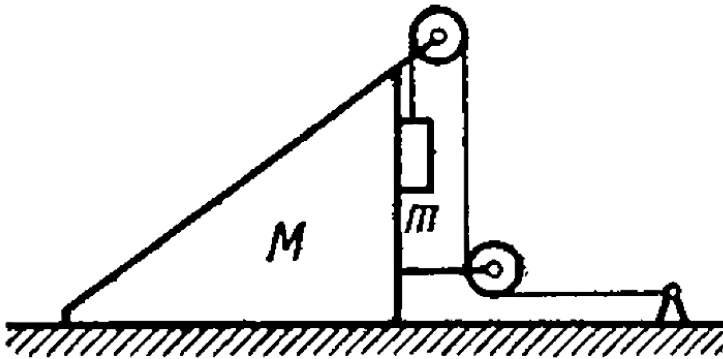




Watch Video Solution

20. In the arrangement shown in figure the masses of the wedge  $M$  and the body  $m$  are known. The appreciable friction exists only between the wedge and the body  $m$ , the friction coefficient being equal to  $k$ . The masses of the pulley and the thread are negligible. Find the acceleration of the body  $m$  relative to the horizontal surface on which the

wedge slides.

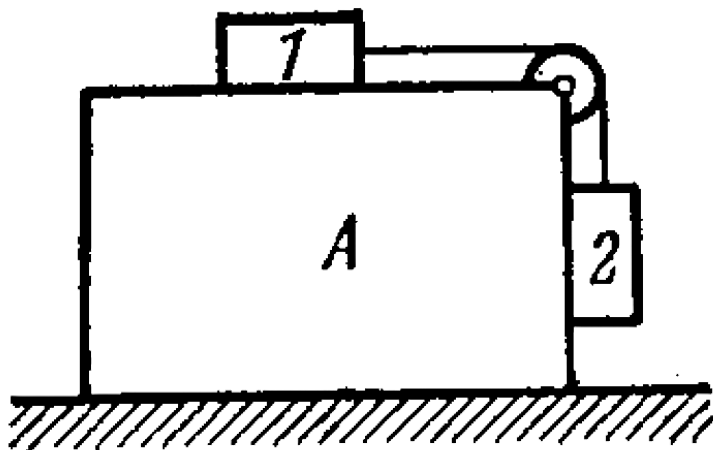


[Watch Video Solution](#)



21. What is the minimum acceleration with which bar A (figure) should be shifted horizontally to keep bodies 1 and 2 stationary relative to the bar? The masses of the bodies are equal, and the coefficient of friction between the bar and the bodies is equal to  $k$ . The masses of the pulley and the threads are

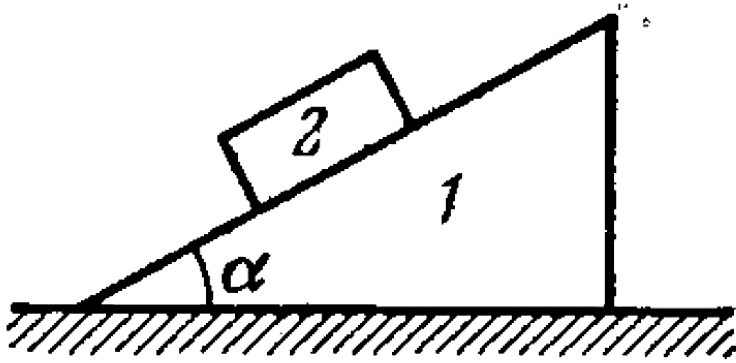
negligible, the friction in the pulley is absent.



[Watch Video Solution](#)

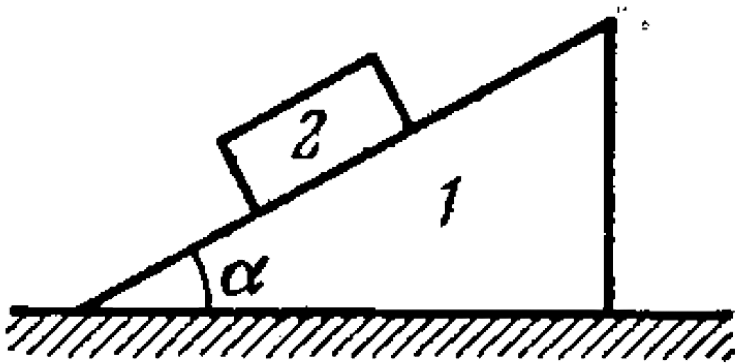
22. Prism 1 with bar 2 of mass  $m$  placed on it gets a horizontal acceleration  $w$  directed to the left (figure). At what maximum value of this acceleration will the bar still stationary relative to the prism, if the coefficient of

friction between them  $k < \cot \alpha$  ?



**Watch Video Solution**

23. Prism 1 of mass  $m_1$  and width angle  $\alpha$  (see figure) rests on a horizontal surface. Bar 2 of mass  $m_2$  is placed on the prism. Assuming the friction to be negligible, find the acceleration of the prism.

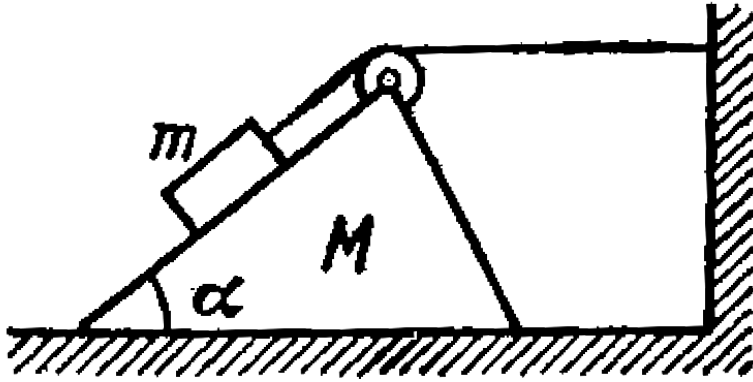




Watch Video Solution

24. In the arrangement shown in figure the masses  $m$  of the bar and  $M$  of the wedge, as well as the wedge angle  $\alpha$ , are known. The masses of the pulley and the thread are negligible. The friction is absent. Find the

acceleration of the wedge  $M$ .



[Watch Video Solution](#)

25. A particle of mass  $m$  moves along a circle of radius  $R$ . Find the modulus of the average vector of the force acting on the particle over the distance equal to a quarter of the circle, if the particle moves

(a) uniformly with velocity  $v$ ,

(b) with constant tangential acceleration  $w_\tau$ , the initial velocity being equal to zero.



[View Text Solution](#)



**26.** An aircraft loops the loop of radius  $R = 500m$  with a constant velocity  $v = 360km$  per hour. Find the weight of the flyer of mass  $m = 70kg$  in the lower, upper, and middle points of the loop.



**View Text Solution**

**27.** A small sphere of mass  $m$  suspended by a thread is first taken aside so that the thread forms the right angle with the vertical and

then released. Find:

(a) the total acceleration of the sphere and the thread tension as a function of  $\theta$ , the angle of deflection of the thread from the vertical,

(b) the thread tension at the moment when the vertical component of the sphere's velocity is maximum,

(c) the angle  $\theta$  between the thread and the vertical at the moment when the total acceleration vector of the sphere is directed horizontally.

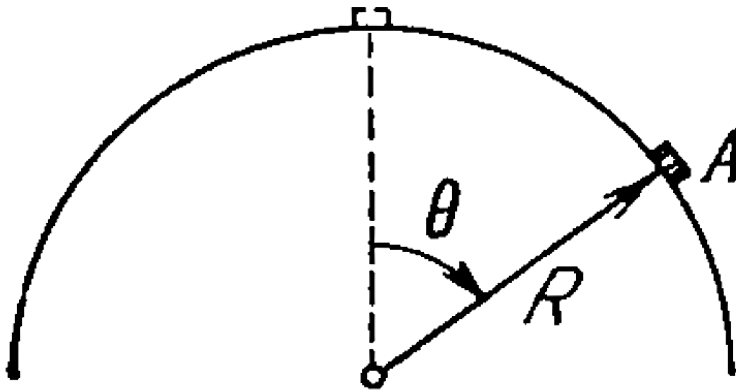
**28.** A ball suspended by a thread swings in a vertical plane so that its acceleration in the extreme position and lowest position are equal. The angle of thread deflection in the extreme position will be - 2



**Watch Video Solution**

**29.** A small body A starts sliding off the top of a smooth sphere of radius R. Find the angle  $\theta$

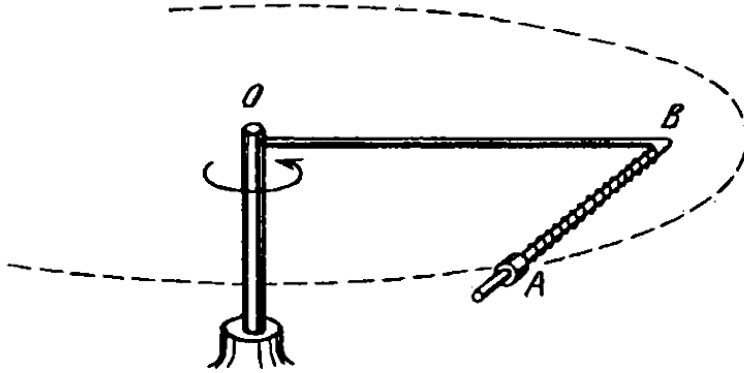
(figure) corresponding to the point at which the body breaks off the sphere, as well as the break-off velocity of the body.



 [View Text Solution](#)

**30.** A device (figure) consists of a smooth L-shaped rod located in a horizontal plane and a sleeve A of mass  $m$  attached by a weightless spring to a point B. The spring stiffness is equal to  $k$ . The whole system rotates with a constant angular velocity  $\omega$  about a vertical axis passing through the point O. Find the elongation of the spring. How is the result

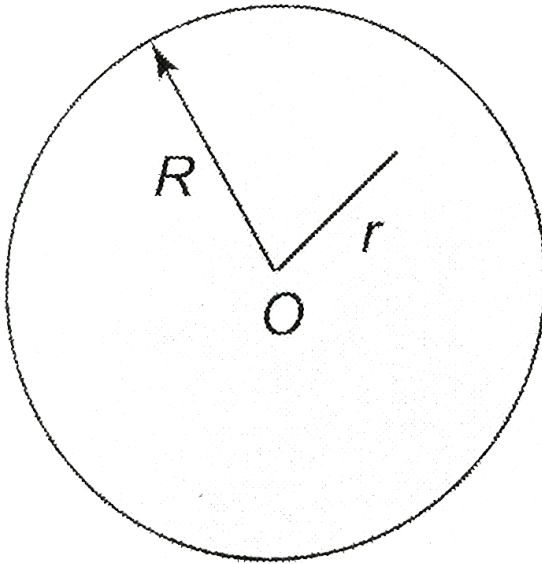
affected by the rotation direction?



[View Text Solution](#)

**31.** A cyclist rides along the circumference of a circular horizontal plane of radius  $R$ , with the friction coefficient  $\mu = \mu_0 \left(1 - \frac{r}{R}\right)$ , where  $\mu_0$  is constant and  $r$  is distance from centre of plane  $O$ . Find the radius of the circle along which the cyclist can ride with the maximum

velocity, what is this valocity?



Watch Video Solution

32. A car moves with a constant tangential acceleration  $w_\tau = 0.62m / s^2$  along a



horizontal surface circumscribing a circle of wheels of the car and the surface is  $k = 0.20$ . What distance will the car ride without sliding if at the initial moment of time its velocity is equal to zero?



[View Text Solution](#)

**33.** A car moves uniformly along a horizontal since curvey  $= a \sin(x / \alpha)$ , when  $a$  and  $\alpha$  are certain constnat The coefficient of friction between the wheels and the road is equal to  $\mu$

. At what velocity will the car ride without sliding ?



[Watch Video Solution](#)

**34.** A chain of mass  $m$  forming a circle of radius  $R$  is slipped on a smooth round cone with half- angle  $\theta$ . Find the tension in the chain if it rotates with a constant angular velocity  $\omega$  about a vertical axis coinciding with the symmetry axis of the cone .



[Watch Video Solution](#)

**35.** A fixed pulley carries a weightless thread with masses  $m_1$  and  $m_2$  at its ends. There is friction between the thread and the pulley. It is such that the thread starts slipping when the ratio  $m_2/m_1 = \eta_0$  find :

(a) The friction coefficient

(b) The acceleration of the mass when

$$m_2/m_1 = \eta > \eta_0$$



**Watch Video Solution**

**36.** A particle of mass  $m$  moves along the internal smooth surface of a vertical cylinder of radius  $R$ . Find the force with which the particle acts on the cylinder wall if at the initial moment of time its velocity equals  $v_0$  and forms an angle  $\alpha$  with the horizontal.



**View Text Solution**

**37.** Find the magnitude and direction of the force acting on the particle of mass  $m$  during

its motion in the plane  $xy$  according to the law  $x = a \sin \omega t$ ,  $y = b \cos \omega t$ , where  $a$ ,  $b$ , and  $\omega$  are constants.



[View Text Solution](#)

**38.** A body of mass  $m$  is thrown at an angle to the horizontal with the initial velocity  $v_0$ .

Assuming the air drag to be negligible, find:

(a) the momentum increment  $\Delta p$  that the body acquires over the first  $t$  seconds of motion,

(b) the modulus of the momentum increment  $\Delta p$  during the total time of motion.



[View Text Solution](#)

**39.** At the moment  $t = 0$  a stationary particle of mass  $m$  experiences a time-dependent force  $F = at(\tau - t)$ , where  $a$  is a constant vector,  $\tau$  is the time during which the given force acts.

Find:

(a) the momentum of the particle when the action of the force discontinued:

(b) the distance covered by the particle while the force acted.



[View Text Solution](#)

**40.** At the moment  $t = 0$  a particle of mass  $m$  starts moving due to a force  $F = F_0 \sin \omega t$ , where  $F_0$  and  $\omega$  are constants. Find the distance covered by the particle as a function of  $t$ . Draw the approximate plot of this function.



[View Text Solution](#)

41. At the moment  $t = 0$  a particle of mass  $m$  starts moving due to a force  $F = F_0 \cos \omega t$ , where  $F_0$  and  $\omega$  are constants. How long will it be moving until it stops for the first time? What distance will it traverse during that time? What is the maximum velocity of the particle over this distance?



[View Text Solution](#)



**42.** A motor-boat of mass  $m$  moves along a lake with velocity  $v_0$ . At the moment  $t = 0$  the engine of the boat is shut down. Assuming the resistance of the particle to-be proportional to the velocity of the boat  $F = -rv$ , find:

(a) How long the motor boat moved with the shut down engine,

(b) (b) The velocity of the motor boat as a function of the distance covered with the shutdown engine, as well as total distance covered till the complete stop.

(c ) The mean velocity of the motor boat over

the time interval (beginning with the moment  $t=0$ ), during which its velocity decreases  $\eta$  times.



[Watch Video Solution](#)

**43.** Having gone through a plank of thickness  $h$ , a bullet changed its velocity from  $v_0$  to  $v$ . Find the time of motion of the bullet in the plank, assuming the resistance force to be proportional to the square of the velocity.



[View Text Solution](#)

**44.** A small bar starts sliding down an inclined plane forming an angle  $\alpha$  with the horizontal. The friction coefficient depends on the distance  $x$  covered as  $k = ax$ , where  $a$  is a constant. Find the distance covered by the bar till it stops, and its maximum velocity over this distance.



**Watch Video Solution**

**45.** A body of mass  $m$  rests on a horizontal plane with the friction coefficient  $k$ . At the moment  $t = 0$  a horizontal force is applied to it, which varies with time as  $F = at$ , where  $a$  is a constant vector.

Find the distance traversed by the body during the first  $t$  seconds after the force action began.



**View Text Solution**

**46.** A body of mass  $m$  is thrown straight up with velocity  $v_0$ . Find the velocity  $v'$  with which the body comes down if the air drag equals  $kv^3$ , where  $k$  is a constant and  $v$  is the velocity of the body.



[View Text Solution](#)

**47.** A particle of mass  $m$  moves in a certain plane  $P$  due to a force  $F$  whose magnitude is constant and whose vector rotates in that

plane with a constant angular velocity  $\omega$ .

Assuming the particle to be stationary at the moment  $t = 0$ , find:

(a) its velocity as a function of time,

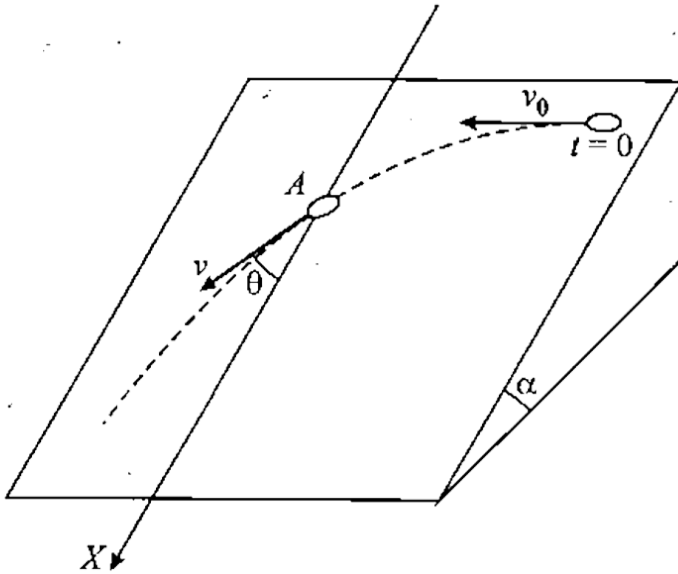
(b) the distance covered by the particle between two successive stops, and the mean velocity over this time.



[View Text Solution](#)

**48.** A small disc A is placed on an inclined plane forming an angle  $\alpha$  with the horizontal

and is imparted an initial velocity  $v_0$ . Find how the velocity of the disc depends on the angle  $\theta$ , shown in figure-2.209, if the friction coefficient  $\mu = \tan \alpha$  and at the initial moment  $\theta = \pi / 2$



[Watch Video Solution](#)

**49.** A chain of length  $l$  is placed on a smooth spherical surface of radius  $R$  with one of its ends fixed at the top of the sphere. What will be the acceleration  $w$  of each element of the chain when its upper end is released? It is assumed that the length of the chain

$$l < \frac{1}{2}\pi R.$$



**Watch Video Solution**

**50.** A small body is placed on the top of a smooth sphere of radius  $R$ . Then the sphere is



imparted a constant acceleration  $w_0$  in the horizontal direction and the body begins sliding down. Find:

(a) the velocity of the body relative to the sphere at the moment of break-off,

(b) the angle  $\theta_0$  between the vertical and the radius vector drawn from the centre of the sphere to the break-off point, calculate  $\theta_0$  for

$$w_0 = g.$$



**Watch Video Solution**

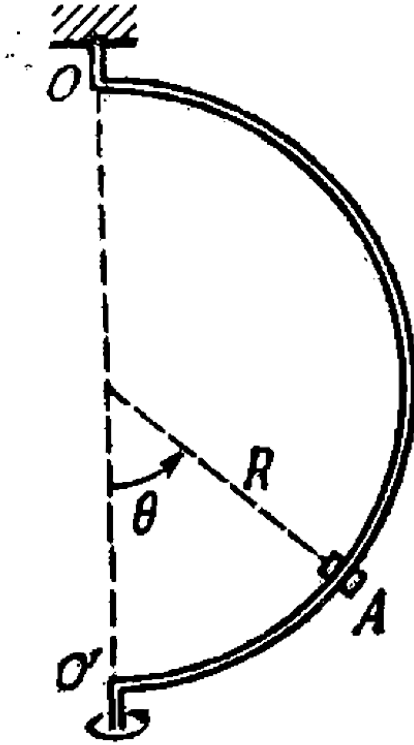
51. A particle moves in a plane under the action of a force which is always perpendicular to the particle's velocity and depends on a distance to a certain point on the plane as  $1 / r^\eta$ , where  $\eta$  is a constant. At what value of  $\eta$  will the motion of the particle along the circle be steady?



[View Text Solution](#)

**52.** A sleeve A can slide freely along a smooth rod bent in the shape of a half-circle of radius  $R$ (figure). The system is set in rotation with a constant angular velocity  $\omega$  about a vertical axis  $OO'$ . Find the angle  $\theta$  corresponding to

the steady position of the sleeve.



[Watch Video Solution](#)

53. A rifle was aimed at the vertical line on the target located precisely in the northern direction, and then fired. Assuming the air drag to be negligible, find how much off the line, and in what direction, will the bullet hit the target. The shot was fired in the horizontal direction at the latitude  $\varphi = 60^\circ$ , the bullet velocity  $v = 900\text{m/s}$ , and the distance from the target equals  $s = 1.0\text{km}$ .



[View Text Solution](#)

54. A horizontal disc rotates with a constant angular velocity  $\omega = 6.0 \text{ rad/s}$  about a vertical axis passing through its centre. A diameter of the disc with a velocity  $v' = 50 \text{ cm/s}$  which is constant relative to the disc. Find the force that the disc exerts on the body at the moment when it is located at the distance  $r = 30 \text{ cm}$  from the rotation axis.



**Watch Video Solution**

55. A horizontal smooth rod AB rotates with a constant angular velocity  $\omega = 2.00 \text{ rad/s}$  about a vertical axis passing through its end A. A freely sliding sleeve of mass  $m = 0.50 \text{ g}$  moves along the rod from the point A with the initial velocity  $v_0 = 1.00 \text{ m/s}$ . Find the Coriolis force acting on the sleeve (in the reference frame fixed to rotating rod) at the moment when the sleeve is located at the distance  $r = 50 \text{ cm}$  from the rotation axis.



[Watch Video Solution](#)

**56.** A horizontal disc of radius  $R$  rotates with a constant angular velocity  $\omega$  about a stationary vertical axis passing through its edge. Along the circumference of the disc a particle of mass  $m$  moves with a velocity that is constant relative to the disc. At the moment when the particle is at the maximum distance from the rotation axis, the resultant of the inertial forces  $F_{in}$  acting on the particle in the reference frame fixed to the disc turns into zero. Find:

(a) the acceleration  $w'$  of the particle relative



to the disc,

(b) the dependence of  $F_{in}$  on the distance from the rotation axis.



[Watch Video Solution](#)

**57.** A small body of mass  $m = 0.30\text{kg}$  starts sliding down from the top of a smooth sphere of radius  $R = 1.00\text{m}$ . The sphere rotates with a constant angular velocity  $\omega = 6.0\text{rad/s}$  about a vertical axis passing through its centre. Find the centrifugal force of inertia

and the Coriolis force at the moment when the body breaks off the surface of the sphere in the reference frame fixed to the sphere.



[View Text Solution](#)

**58.** A train of mass  $m = 2000$  tons moves in the latitude  $\varphi = 60^\circ$  North. Find:

(a) the magnitude and direction of the lateral force that the train exerts on the rails if it moves along a meridian with a velocity  $v = 54 \text{ km}$  per hour,

(b) in what direction and with what velocity the train should move for the resultant of the inertial forces acting on the train in the reference frame fixed to the Earth to be equal to zero.



[View Text Solution](#)

**59.** At the equator a stationary (relative to the Earth) body falls down from the height  $h = 500m$ . Assuming the air drag to be negligible, find how much off the vertical, and

in what direction, the body will deviate when it hits the ground.



[Watch Video Solution](#)

## Laws Of Conservation Of Energy Momentum And Angular Momentum

1. A particle has shifted along some trajectory in the plane  $xy$  from point 1 whose radius vector  $r_1 = i + 2j$  to point 2 with the radius vector  $r_2 = 2i - 3j$ . During that time the

particle experienced the action of certain forces, one of which being  $F = 3i + 4j$ . Find the work performed by the force F. (Here  $r_1, r_2$ , and F are given in SI units).



**Watch Video Solution**

2. A locomotive of mass  $m$  starts moving so that its velocity varies according to the law  $V = \alpha\sqrt{s}$ , where  $\alpha$  is a constant and  $s$  is the distance covered. Find the total work done by all the forces acting on the locomotive during

the first  $t$  seconds after the beginning of motion.



[Watch Video Solution](#)

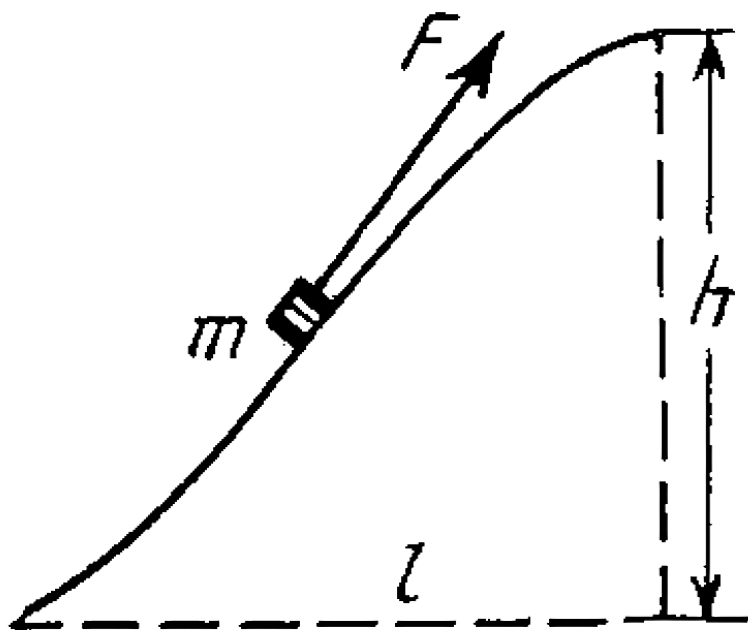
3. The kinetic energy of a particle moving along a circle of radius  $R$  depends on the distance covered  $s$  as  $T = as^2$ , where  $a$  is ticle as a function of  $s$ .



[Watch Video Solution](#)

4. A body of mass  $m$  was slowly hauled up the hill (figure) by a force  $F$  which at each point was directed along a tangent to the trajectory. Find the work performed by this force, if the height of the hill is  $h$ , the length of its base  $l$ ,

and the coefficient of friction  $k$ .



[Watch Video Solution](#)



5. A disc of mass  $m = 50g$  slides with the zero initial velocity down an inclined plane set at an angle  $\alpha = 30^\circ$  to the horizontal, having traversed the distance  $l = 50cm$  along the horizontal plane, the disc stops. Find the work performed by the friction forces over the whole distance, assuming the friction coefficient  $k = 0.15$  for both inclined and horizontal planes.



[Watch Video Solution](#)

6. Two bars of masses  $m_1$  and  $m_2$  connected by a non-deformed light spring rest on a horizontal plane. The coefficient of friction between the bars and the surface is equal to  $k$ . What minimum constant force has to be applied in the horizontal direction to the bar of mass  $m_1$  in order to shift the other bar?



[Watch Video Solution](#)

7. A chain of mass  $m = 0.80\text{kg}$  and length  $l = 1.5m$  rests on a rough-surfaced table so

that one of its ends hangs over the edge. The chain starts sliding off the table all by itself provided the overhanging part equals  $\eta = 1/3$  of the chain length. What will be the total work performed by the friction forces acting on the chain by the moment it slides completely off the table?



[Watch Video Solution](#)

**8.** A body of mass  $m$  is thrown at an angle  $\alpha$  to the horizontal with the initial velocity  $v_0$ . Find

the mean power developed by gravity over the whole time of motion of the body, and the instantaneous power of gravity as a function of time.



[Watch Video Solution](#)

9. A particle of mass  $m$  moves along a circle of radius  $R$  with a normal acceleration varying with time as  $w_n = at^2$ , where  $a$  is a constant. Find the time dependence of the power developed by all the forces acting on the

particle, and the mean value of this power averaged over the first  $t$  seconds after the beginning of motion.



[Watch Video Solution](#)

**10.** A small body of mass  $m$  is located on a horizontal plane at the point  $O$ . The body of mass  $m$  is located on a horizontal plane at the point  $O$ . The body acquires a horizontal velocity  $v_0$ . Find,

(a) the mean power developed by the friction

force during the whole time of motion, if the friction coefficient  $k = 0.27$ ,  $m = 1.0\text{kg}$ , and  $v_0 = 1.5\text{m/s}$ ,

(b) the maximum instantaneous power developed by the friction force, if the friction coefficient varies as  $k = \alpha x$ , where  $\alpha$  is a constant, and  $x$  is the distance from the point O.



**Watch Video Solution**

11. A small body of mass  $m = 0.10\text{kg}$  moves in the reference frame rotating about a stationary axis with a constant angular velocity  $\omega = 5.0\text{rad/s}$ . What work does the centrifugal force of inertia perform during the transfer of this body along an arbitrary path from point 1 to point 2 which are located at the distances  $r_1 = 30\text{cm}$  and  $r_2 = 50\text{cm}$  from the rotation axis?



[Watch Video Solution](#)

**12.** A system consists of two springs connected in series and having the stiffness coefficients  $k_1$  and  $k_2$ . Find the minimum work to be performed in order to stretch this system by  $\Delta l$ .



**Watch Video Solution**

**13.** A body of mass  $m$  is hauled from the Earth's surface by applying a force  $F$  varying with the height of ascent  $y$  as  $F = 2(ay - 1)mg$ , where  $a$  is a positive



constant. Find the work performed by this force and the increment of the body's potential energy in the gravitational field of the Earth over the first half of the ascent.



[Watch Video Solution](#)

**14.** The potential energy of a particle in a certain field has the form  $U = a/r^2 - b/r$ , where  $a$  and  $b$  are positive constants,  $r$  is the distance from the centre of the field. Find:

(a) the value of  $r_0$  corresponding to the

equilibrium position of the particle, examine where this position is steady,

(b) the maximum magnitude of the attraction force, draw the plots  $U(r)$  and  $F_r(r)$  (the projections of the force on the radius vector  $r$ ).



[Watch Video Solution](#)

**15.** In a certain two-dimensional field of force the potential energy of a particle has the uniform  $U = \alpha x^2 + \beta y^2$ , where  $\alpha$  and  $\beta$  are

positive constants whose magnitudes are different. Find out:

(a) whether this field is central,

(b) what is the shape of the equipotential surfaces and also of the surfaces for which the magnitude of the vector of force  $F = \text{const.}$



[Watch Video Solution](#)

**16.** There are two stationary fields of force  $F = ayi$  and  $F = axi + byj$ , where  $i$  and  $j$  are the unit vectors of the  $x$  and  $y$  axes, and  $a$  and  $b$  are

constants. Find out whether these fields are potential.



[Watch Video Solution](#)

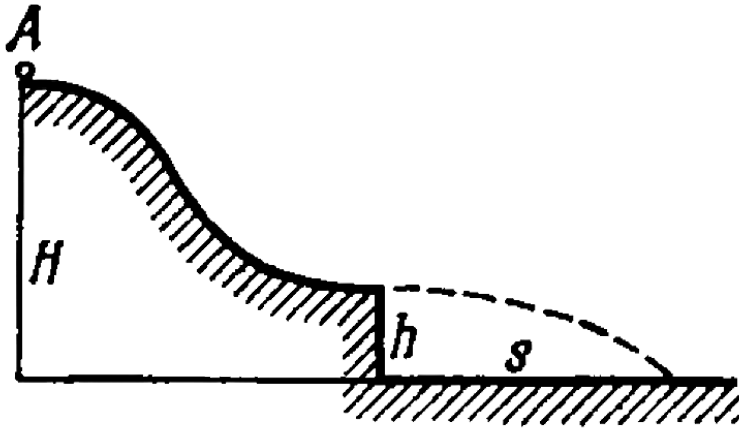
17. A body of mass  $m$  is pushed with the initial velocity  $v_0$  up an inclined plane set at an angle  $\alpha$  to the horizontal. The friction coefficient is equal to  $k$ . What distance will the body cover before it stops and what work do the friction forces perform over this distance?



[Watch Video Solution](#)

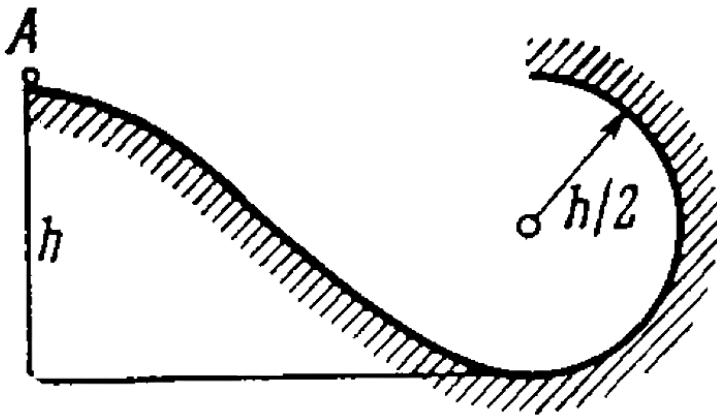
**18.** A small disc A slides down with initial velocity equal to zero from the top of a smooth hill of height  $H$  having a horizontal portion. What must be the height of the horizontal portion  $h$  to ensure the maximum distance  $s$  covered by the disc? What is it

equal to?



[Watch Video Solution](#)

19. A small body A starts sliding from the height  $h$  down an inclined groove passing into a half-circle of radius  $h/2$  (figure).



Assuming the friction to be negligible, find the

velocity of the body at the highest point of its trajectory (after breaking off the groove).



**Watch Video Solution**

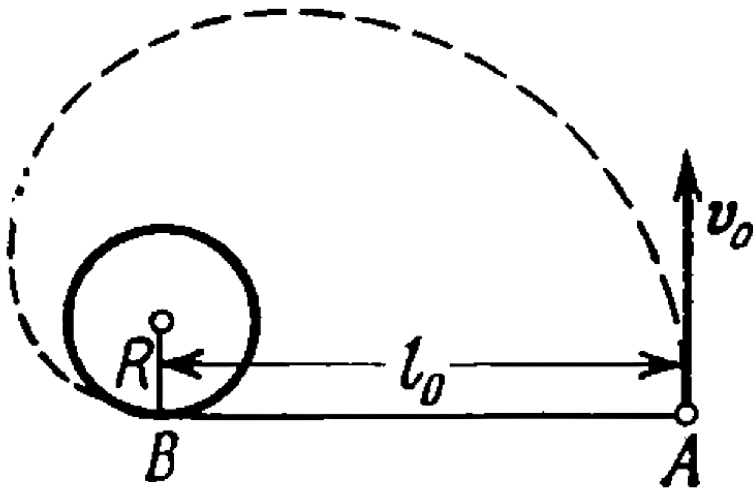
**20.** A ball of mass  $m$  is suspended by a thread of length  $l$ . With what minimum velocity has the point of suspension to be shifted in the horizontal direction for the ball to move along the circle about that point? What will be the tension of the thread at the moment it will be passing the horizontal position?





Watch Video Solution

21. A horizontal plane supports a stationary vertical cylinder of radius  $R$  and a disc  $A$  attached to the cylinder by a horizontal thread  $AB$  of length  $l_0$  (figure, to view). An initial velocity  $v_0$



is imparted to the disc as shown in the figure. How long will it move along the plane until it strikes against the cylinder? The friction is assumed to be absent.



[Watch Video Solution](#)

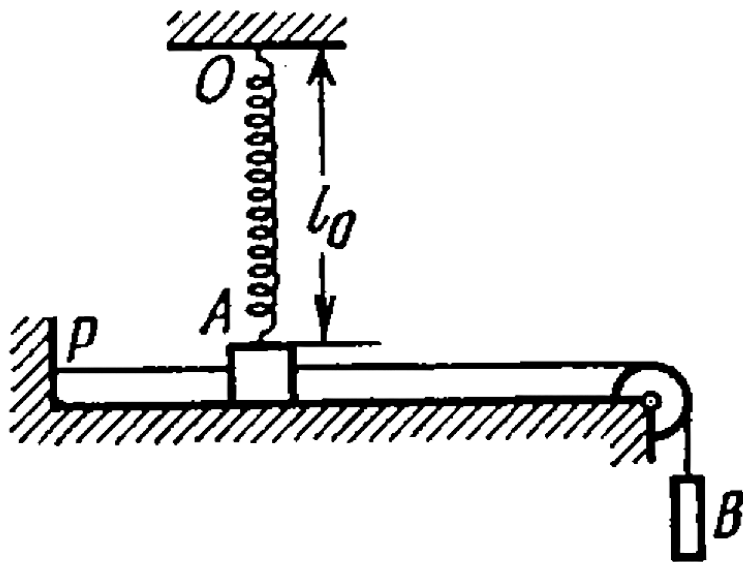
22. A smooth rubber cord of length  $l$  whose coefficient of elasticity is  $k$  is suspended by one end from the point  $O$  (figure). The other end is fitted with a catch  $B$ . A small sleeve  $A$  of mass  $m$  starts falling from the point  $O$ . Neglecting the masses of the thread and the catch, find the maximum elongation of the

cord.



Watch Video Solution

23. A small bar  $A$  resting on a smooth horizontal plane is attached by threads to a point  $P$ (figure) and, by means of a weightless pulley, to a weight  $B$  possessing the same mass as the bar itself.



Besides, the bar is also attached to a point  $O$  by means of a light non-deformed spring of length  $l_0 = 50\text{cm}$  and stiffness  $x = 5mg/l_0$ , where  $m$  is the mass of the bar. The thread  $PA$  having been burned, the bar starts moving. Find its velocity at the moment when it is breaking off the plane.

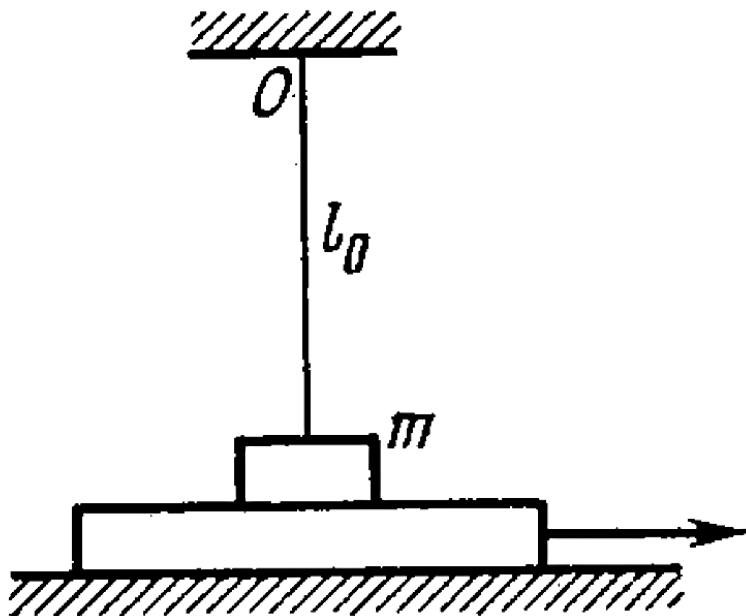


[Watch Video Solution](#)

**24.** A horizontal plane supports a plank with a bar of mass  $m = 1.0\text{kg}$  placed on it and

attached by a light elastic non-deformed cord of length  $l_0 = 40\text{cm}$  to a point O (figure). The coefficient of friction between the bar and the plank equals  $k = 0.20$ . The plank is slowly shifted to the right until the bar starts sliding over it. It occurs at the moment when the cord deviates from the vertical by an angle  $\theta = 30^\circ$ . Find the work that has been performed by that moment by the friction force acting on the bar in the reference frame fixed to the

plane.



[Watch Video Solution](#)



25. A smooth light horizontal rod AB can rotate about a vertical axis passing through its end A. The rod is fitted with a small sleeve of mass  $m$  attached to the end A by a weightless spring of length  $l_0$  and stiffness  $x$ . What work must be performed to slowly get this system going and reaching the angular velocity  $\omega$ ?



[Watch Video Solution](#)

**26.** A pulley fixed to the ceiling carries a thread with bodies of masses  $m_1$  and  $m_2$  attached to its ends. The masses of the pulley and the thread are negligible, friction is absent. Find the acceleration  $w_C$  of the centre of inertia of this system.



**Watch Video Solution**

**27.** Two interacting particles from a closed system whose centre of inertia is at rest.

Figure illustrates the positions of both particles at a certain moment and the trajectory of the particle of mass  $m_2$ . Draw the trajectory of the particle of mass  $m_2$  if  $m_2 = m_1/2$ .



Watch Video Solution

**28.** A closed chain A of mass  $m = 0.36\text{kg}$  is attached to a vertical rotating shaft by means of a thread (figure), and rotates with a constant angular velocity  $\omega = 35\text{rad/s}$ . The thread forms an angle  $\theta = 45^\circ$  with the vertical. Find the distance between the chain's

of the thread.



Watch Video Solution

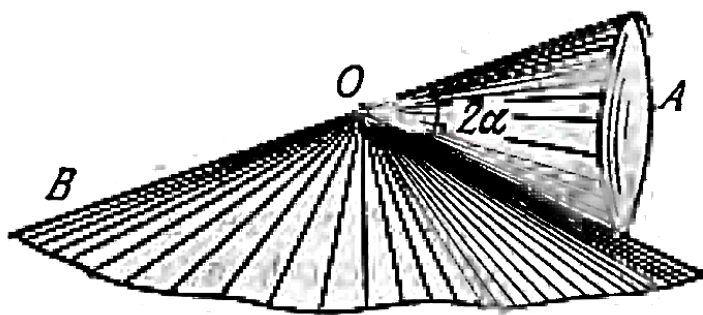
29. A round cone A of mass  $m = 3.2\text{kg}$  and half-angle  $\alpha = 10^\circ$  rolls uniformly and without slipping along a round conical surface B so that its apex O remains stationary (figure). The centre of gravity of the cone A is at the same level as the point O and at a distance  $l = 17\text{cm}$  from it. The cone's axis moves with angular velocity  $\omega$ . Find:

(a) the static friction force acting on the cone

A, if  $\omega = 1.0\text{rad/s}$ ,

(b) at what values of  $\omega$  the cone A will roll without sliding, if the coefficient of friction

between the surfaces is equal to  $k = 0.25$ .



**Watch Video Solution**

**30.** In the reference frame  $K$  two particles travel along the  $x$  axis, one of mass  $m_1$  with velocity  $v_1$ , and the other of mass  $m_2$  with velocity  $v_2$ . Find:

(a) the velocity  $V$  of the reference frame  $K'$  in which the cumulative kinetic energy of these particles is minimum,

(b) the cumulative kinetic energy of these particles in the  $K'$  frame.



**Watch Video Solution**



**31.** The reference frame, in which the centre of inertia of a given system of particles is at rest, translates with a velocity  $V$  relative to an inertial reference frame  $K$ . The mass of the system of particles equals  $m$ , and the total energy of the system in the frame of the centre of inertia is equal to  $\tilde{E}$ . Find the total energy  $E$  of this system of particles in the reference frame  $K$ .



**Watch Video Solution**

**32.** Two small discs of masses  $m_1$  and  $m_2$  interconnected by a weightless spring rest on a smooth horizontal plane. The discs are set in motion with initial velocities  $v_1$  and  $v_2$  whose directions are mutually perpendicular and lie in a horizontal plane. Find the total energy  $\tilde{E}$  of this system in the frame of the centre of inertia.



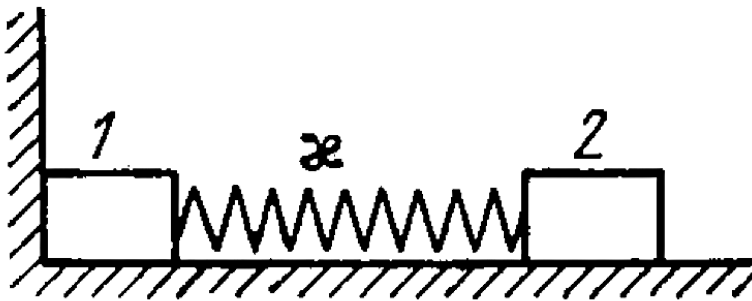
**Watch Video Solution**

**33.** A system consists of two small spheres of masses  $m_1$  and  $m_2$  interconnected by a weightless spring. At the moment  $t = 0$  the spheres are set in motion with the initial velocities  $v_1$  and  $v_2$  after which the system starts moving in the Earth's uniform gravitational field. Neglecting the air drag, find the time dependence of the total momentum of this system in the process of motion and of the radius vector of its centre of inertia relative to the initial position of the centre.



**Watch Video Solution**

34. Two bars of masses  $m_1$  and  $m_2$  connected by a weightless spring of stiffness  $\kappa$  (figure) rest on a smooth horizontal plane.



Bar 2 is shifted a small distance  $x$  to the left

and then released. Find the velocity of the centre of inertia of the system after bar 1 breaks off the wall.



[Watch Video Solution](#)

**35.** Two bars connected by a weightless spring of stiffness  $\kappa$  and length (in the non-deformed state)  $l_0$  rest on a horizontal plane. A constant horizontal force  $F$  starts acting on one of the bars as shown in figure. Find the maximum and minimum distances between the bars

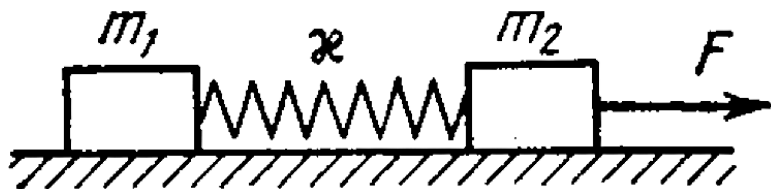
during the subsequent motion of the system,

if the masses of the bars are:

(a) equal:

(b) equal to  $m_1$  and  $m_2$ , and the force  $F$  is

applied to the bar of mass  $m_2$ .



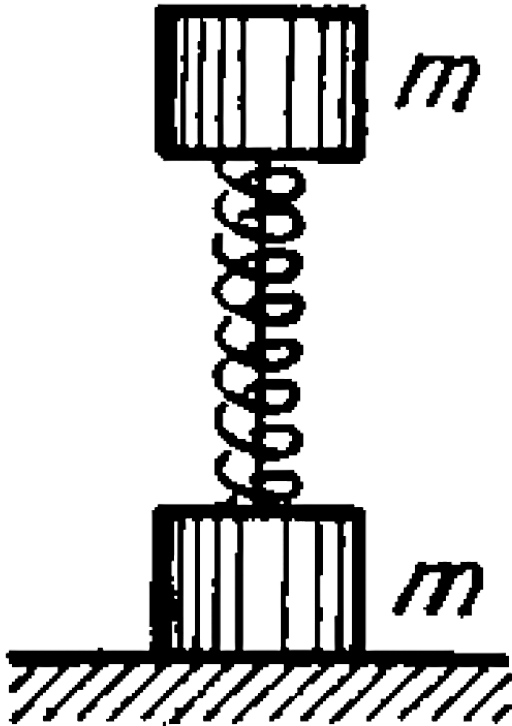
**Watch Video Solution**

**36.** A system consists of two identical cubes, each of mass  $m$ , linked together by the compressed weightless spring of stiffness  $\kappa$  (figure). The cubes are also connected by a thread which is burned through at a certain moment. Find:

(a) at what values of  $\Delta l$ , the initial compression of the spring, the lower cube will bounce up after the thread has been burned through:

(b) to what height  $h$  the centre of gravity of

this system will rise if the initial compression of the spring  $\Delta l = 7mg/\kappa$ .



Watch Video Solution



**37.** Two identical buggies 1 and 2 with one man in each move without friction due to inertia along the parallel rails toward each other. When the buggies get opposite each other, the men exchange their places by jumping in the direction perpendicular to the motion direction. As a consequence, buggy 1 stops and buggy 2 keeps moving in the same direction, with its velocity becoming equal to  $v$ . Find the initial velocities of the buggies  $v_1$  and  $v_2$  if the mass of each buggy (without a man) equals  $M$  and the mass of each man  $m$ .



Watch Video Solution

**38.** Two identical buggies move one after the other due to inertia (without friction) with the same velocity  $v_0$ . A man of mass  $m$  rides the rear buggy. At a certain moment the man jumps into the front buggy with a velocity  $u$  relative to his buggy. Knowing that the mass of each buggy is equal to  $M$ , find the velocities with which the buggies will move after that.



Watch Video Solution

**39.** Two men, each of mass  $m$ , stand on the edge of a stationary buggy of mass  $M$ . Assuming the friction to be negligible, find the velocity of the buggy after both men jump off with the same horizontal velocity  $u$  relative to the buggy: (1) simultaneously, (2) one after the other. In what case will the velocity of the buggy be greater and how many times?



**Watch Video Solution**

**40.** A chain hangs on a thread and touches the surface of a table by its lower end. Show that after the thread has been burned through, the force exerted on the table by the falling part of the chain at any moment is twice as great as the force of pressure exerted by the part already resting on the table.



**Watch Video Solution**

**41.** A steel ball of mass  $m = 50g$  falls from the height  $h = 1.0m$  on the horizontal surface of a massive slab. Find the cumulative momentum that the ball imparts to the slab after numerous bounces, if every impact decreases the velocity of the ball  $\eta = 1.25$  times.



**Watch Video Solution**

42. A raft of mass  $M$  with a man of mass  $m$  aboard stays motionless on the surface of a lake. The man moves a distance  $l'$  relative to the raft with velocity  $v'(t)$  and then stops. Assuming the water resistance to be negligible, find:

(a) the displacement of the raft 1 relative to the shore,

(b) the horizontal component of the force with which the man acted on the raft during the motion.



**Watch Video Solution**

**43.** A stationary pulley carries a rope whose one end supports a ladder with a man and the other end the counterweight of mass  $M$ . The man of mass  $m$  climbs up a distance  $l'$  with respect to the ladder and then stops. Neglecting the mass of the rope and the friction in the pulley axle, find the displacement  $l$  of the centre of inertia of this system.



**Watch Video Solution**

**44.** A cannon of mass  $M$  starts sliding freely down a smooth inclined plane at an angle  $\alpha$  to the horizontal. After the cannon covered the distance  $l$ , a shot was fired, the shell leaving the cannon in the horizontal direction with a momentum  $p$ . As a consequence, the cannon stopped. Assuming the mass of the shell to be negligible, as compared to that of cannon, determine the duration of the shot.



**Watch Video Solution**



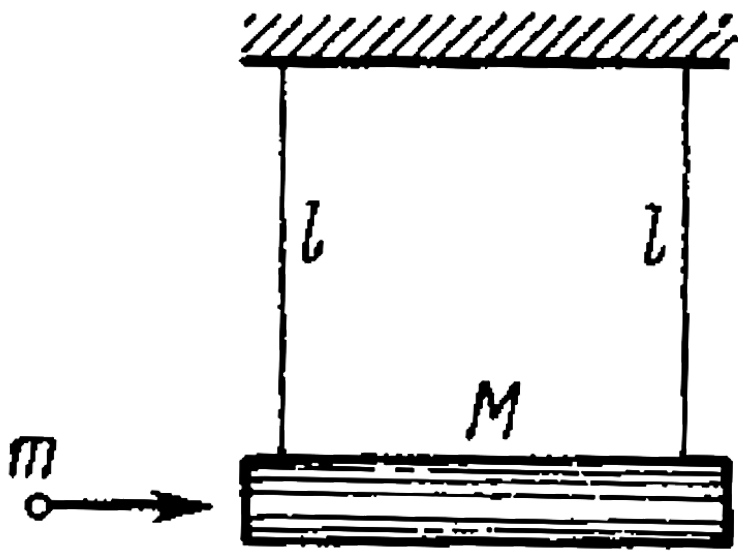
**45.** A horizontally flying bullet of mass  $m$  gets stuck in a body of mass  $M$  suspended by two identical threads of length  $l$  (figure).

As a result, the threads swerve through an angle  $\theta$ . Assuming  $m < M$ , find:

(a) the velocity of the bullet before striking the body,

(b) the fraction of the bullet's initial kinetic

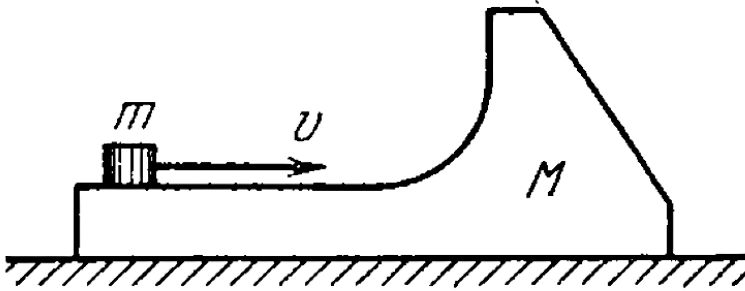
energy that turned into heat.



Watch Video Solution

**46.** A body of mass  $M$  (figure) with a small disc of mass  $m$  placed on it rests on a smooth horizontal plane. The disc is set in motion in the horizontal direction with velocity  $v$ . To what height (relative to the initial level) will the disc rise after breaking off the body  $M$ ?

The friction is assumed to be absent.



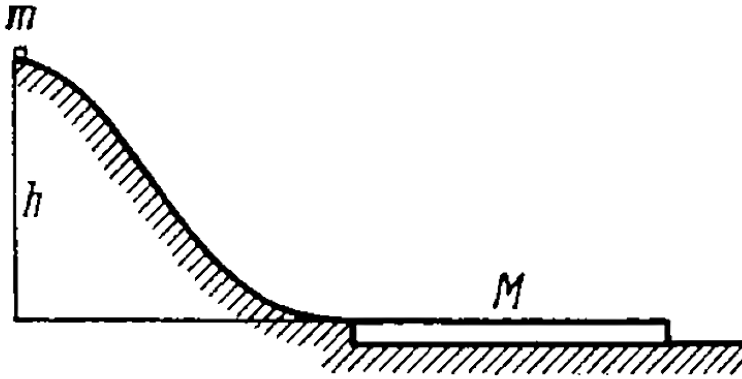
**Watch Video Solution**

**47.** A small disc of mass  $m$  slides down a smooth hill of height  $h$  without initial velocity and gets onto a plank of mass  $M$  lying on the horizontal plane at the base of the hill. (figure). Due to friction between the disc and the plank the disc slows down and, beginning with a certain moment, moves in one piece with the plank.

(1) Find the total work performed by the friction forces in this process.

(2) Can it be stated that the result of obtained does not depend on the choice of the

reference frame?



**Watch Video Solution**

**48.** A stone falls down without initial velocity from a height  $h$  onto the Earth's surface. The air drag assumed to be negligible, the stone hits the ground with velocity  $v_0 = \sqrt{2gh}$  relative to the Earth. Obtain the same formula in terms of the reference frame "falling" to the Earth with a constant velocity  $v_0$ .



**View Text Solution**

**49.** A particle of mass  $1.0g$  moving with velocity  $v_1 = 3.0i - 2.0j$  experiences a perfectly inelastic collision with another particle of mass  $2.0g$  and velocity  $v_2 = 4.0j - 6.0k$ . Find the velocity of the formed particle (both the vector  $v$  and its modulus), if the components of the vectors  $v_1$  and  $v_2$  are given in the SI units.



**Watch Video Solution**



**50.** Find the increment of the kinetic energy of the closed system comprising two spheres of masses  $m_1$  and  $m_2$  due to their perfectly inelastic collision, if the initial velocities of the sphere were equal to  $v_1$  and  $v_2$ .



**Watch Video Solution**

**51.** A particle of mass  $m_1$  experienced a perfectly elastic collision with a stationary particle of mass  $m_2$ . What fraction of the

kinetic energy does the striking particle lose, if

(a) it recoils at right angles to its original motion direction,

(b) the collision is a head-on one?



[Watch Video Solution](#)

**52.** Particle 1 experiences a perfectly elastic collision with a stationary particle 2.

Determine their mass ratio, if

(a) after a head-on collision the particles fly apart in the opposite directions with equal

velocities,

(b) the particles fly apart symmetrically relative to the initial motion direction of particle I with the angle of divergence  $\theta = 60^\circ$ .



[Watch Video Solution](#)

**53.** A ball moving translationally collides elastically with another, stationary, ball of the same mass. At the moment of impact the angle between the straight line passing through the centres of the balls and the

direction of the initial motion of the striking ball is equal to  $\alpha = 45^\circ$ . Assuming the balls to be smooth, find the fraction  $\eta$  of the kinetic energy of the striking ball that turned into potential energy at the moment of the maximum deformation.



[Watch Video Solution](#)

**54.** A shell flying with velocity  $v = 500\text{m/s}$  burts into three identical fragementes so that the kinetic energy of the system increases

$\eta = 1.5$  times. What maximum velocity can one of the fragments obtain?



[View Text Solution](#)

**55.** Particle 1 moving with velocity  $v = 10\text{m/s}$  experienced a head-on collision with a stationary particle 2 of the same mass. As a result of the collision, the kinetic energy of the system decreased by  $\eta = 1.0\%$ . Find the magnitude and direction of the velocity of particle 1 after the collision.



[Watch Video Solution](#)

**56.** A particle of mass  $m$  having collided with a stationary particle of mass  $M$  deviated by an angle  $\pi/2$  whereas the particle  $M$  recoiled at an angle  $\theta = 30^\circ$  to the direction of the initial motion of the particle  $m$ . How much (in per cent) and in what way has the kinetic energy of this system changed after the collision, if  $M/m = 5.0$ ?



[View Text Solution](#)

**57.** A closed system consists of two particles of masses  $m_1$  and  $m_2$  which move at right angles to each other with velocities  $v_1$  and  $v_2$ . Find:

(a) the momentum of each particle and

(b) the total kinetic energy of the two particles in the reference frame fixed to their centre of inertia.



**Watch Video Solution**

**58.** A particle of mass  $m_1$  collides elastically with a stationary particle of mass

$m_2(m_1 > m_2)$ . Find the maximum angle through which the striking particle may deviate as a result of the collision.



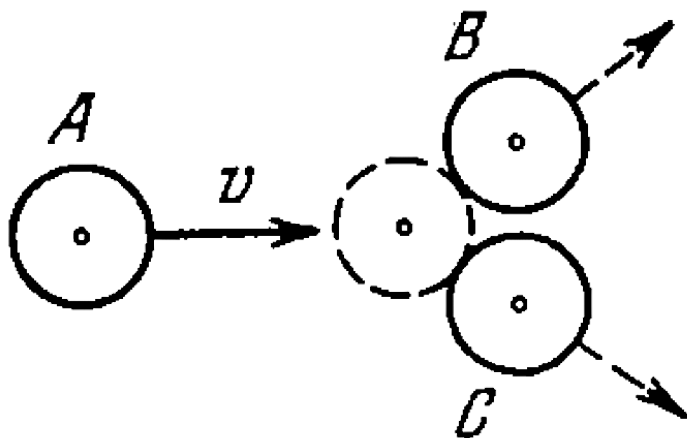
[Watch Video Solution](#)

**59.** Three identical discs A, B, and C (figure) rest on a smooth horizontal plane. The disc A is set in motion with vector  $v$  after which it experiences an elastic collision simultaneously with the discs B and C. The distance between the centres of the latter discs prior of the



collision is  $\eta$  times greater than the diameter of each disc.

Find the velocity of the disc A after the collision. At what value of  $\eta$  will the disc A recoil after the collision, stop, move on?



Watch Video Solution

**60.** A molecule collides with another, stationary, molecule of the same mass.

Demonstrate that the angle of divergence

(a) equals  $90^\circ$  when the collision is ideally elastic,

(b) differs from  $90^\circ$  when the collision is inelastic.



**Watch Video Solution**

61. A rocket ejects a steady jet whose velocity is equal to  $u$  relative to the rocket. The gas discharge rate equals  $\mu \text{ kg/s}$ . Demonstrate that the rocket motion equation in this case takes the form

$$mw = F - \mu u,$$

where  $m$  is the mass of the rocket at a given moment,  $w$  is its acceleration, and  $F$  is the external force.



[Watch Video Solution](#)

**62.** A rocket moves in the absence of external forces by ejecting a steady jet with velocity  $u$  constant relative to the rocket. Find the velocity  $v$  of the rocket at the moment when its mass is equal to  $m$ , if at the initial moment it possessed the mass  $m_0$  and its velocity was equal to zero. Make use of the formula given in the foregoing problem.



**Watch Video Solution**

**63.** Find the law according to which the mass of the rocket varies with time, when the rocket moves with a constant acceleration  $w$ , the external forces are absent, the gas escapes with a constant velocity  $u$  relative to the rocket, and its mass at the initial moment equals  $m_0$ .



**Watch Video Solution**

**64.** A spaceship of mass  $m_0$  moves in the absence of external forces with a constant velocity  $v_0$ . To change the motion direction, a jet engine is switched on. It starts ejecting a gas jet with velocity  $u$  which is constant relative to the spaceship and directed at right angles to the spaceship motion. The engine is shut down when the mass of the spaceship decreases to  $m$ . Through what angle  $\alpha$  did the motion direction of the spaceship deviate due to the jet engine operation?



**Watch Video Solution**

**65.** A cart loaded with sand moves along a horizontal plane due to a constant force  $F$  coinciding in direction with the cart's velocity vector. In the process, sand spills through a hole in the bottom with a constant velocity  $\mu \text{ kg/s}$ . Find the acceleration and the velocity of the cart at the moment  $t$ , if at the initial moment  $t = 0$  the cart with loaded sand had the mass  $m_0$  and its velocity was equal to zero. The friction is to be neglected.

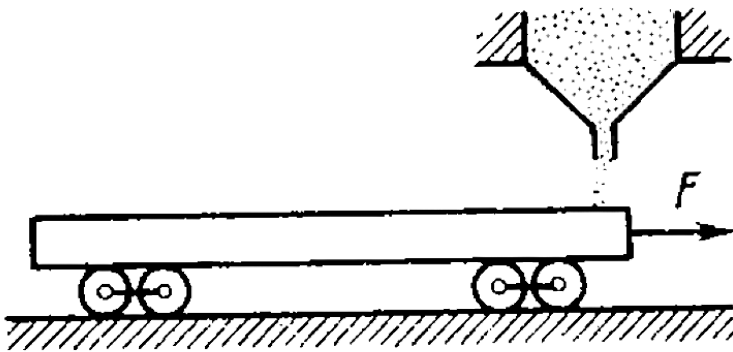


**Watch Video Solution**

**66.** A flatcar of mass  $m_0$  starts moving to the right due to a constant horizontal force  $F$ (figure). Sand spills on the flatcar from a stationary hopper. The velocity of loading is constant and equal to  $\mu \text{ kg/s}$ . Find the time dependence of the velocity and the acceleration of the flatcar in the process of



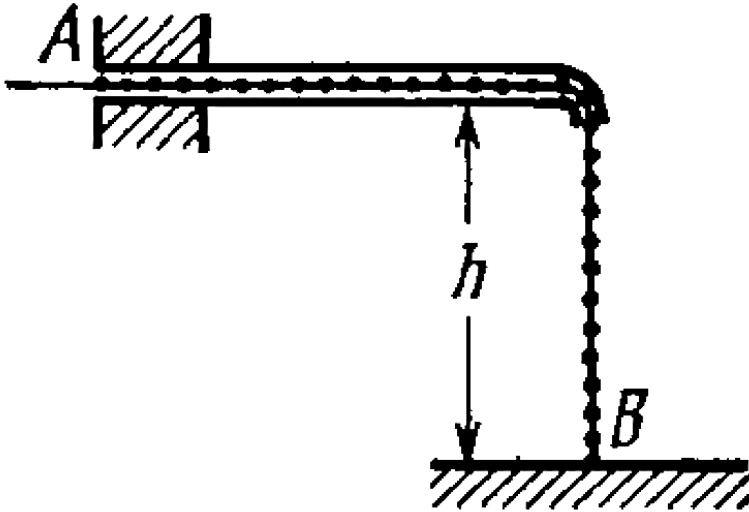
loading. The friction is negligibly small.



**Watch Video Solution**

**67.** A chain AB of length  $l$  is located in a smooth horizontal tube so that its fraction of length  $h$  hangs freely and touches the surface of the table with its end B (figure). At a certain moment the end A of the chain is set free. With what velocity will this end of the chain

slip out of the tube?



Watch Video Solution

**68.** The angular momentum of a particle relative to a certain point O varies with time as  $M = a + bt^2$ , where  $a$  and  $b$  are constant vectors, with  $a \perp b$ . Find the force moment N relative to the point O acting on the particle when the angle between the vectors N and M equals  $45^\circ$ .



**Watch Video Solution**

**69.** A ball of mass  $m$  is thrown at an angle  $\alpha$  to the horizontal with the initial velocity  $v_0$ . Find the time dependence of the magnitude of the ball's angular momentum vector relative to the point from which the ball is thrown. Find the angular momentum  $M$  at the highest point of the trajectory if  $m = 130g$ ,  $\alpha = 45^\circ$ , and  $v_0 = 25m/s$ . The air drag is to be neglected.



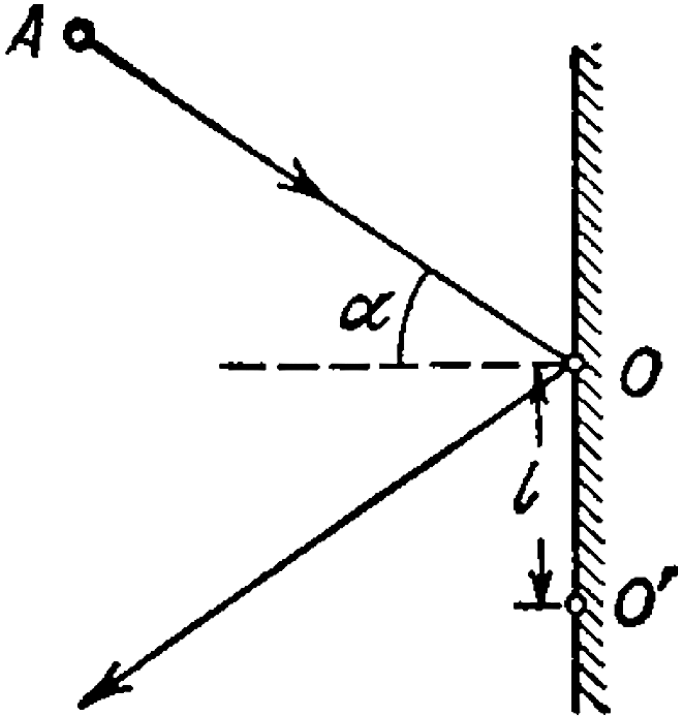
**Watch Video Solution**

**70.** A disc A of mass  $m$  sliding over a smooth horizontal surface with velocity  $v$  experiences a perfectly elastic collision with a smooth stationary wall at a point O (figure). The angle between the motion direction of the disc and the normal of the wall is equal to  $\alpha$ . Find:

(a) the points relative to which the angular momentum  $M$  of the disc remains constant in this process,

(b) the magnitude of the increment of the vector of the disc's angular momentum relative to the point  $O'$  which is located in the plane of the disc's motion at the distance  $l$

from the point O.



Watch Video Solution

71. A small ball of mass  $m$  suspended from the ceiling at a point  $O$  by a thread of length  $l$  moves along a horizontal circle with a constant angular velocity  $\omega$ . Relative to which points does the angular momentum  $M$  of the ball remain constant? Find the magnitude of the increment of the vector of the ball's angular momentum relative to the point  $O$  picked up during half a revolution.



[Watch Video Solution](#)



72. A ball of mass  $m$  falls down without initial velocity from a height  $h$  over the Earth's surface. Find the increment of the ball's angular momentum vector picked up during the time of falling (relative to the point  $O$  of the reference frame moving translationally in a horizontal direction with a velocity  $V$ ). The ball starts falling from the point  $O$ . The air drag is to be neglected.



[Watch Video Solution](#)

**73.** A smooth horizontal disc rotates with a constant angular velocity  $\omega$  about a stationary vertical axis passing through its centre, the point O. At a moment  $t = 0$  a disc is set in motion from that:

point with velocity  $v_0$ . Find the angular momentum  $M(t)$  of the disc relative to the point O in the reference frame fixed to the disc. Make sure that this angular momentum is caused by the Coriolis force.



**View Text Solution**

74. A particle moves along a closed trajectory in a central field of force where the particle's potential energy  $U = kr^2$  ( $k$  is a positive constant,  $r$  is the distance of the particle from the centre  $O$  of the field). Find the mass of the particle if its minimum distance from the point  $O$  equals  $r_1$  and its velocity at the point farthest from  $O$  equals  $v_2$ .



[Watch Video Solution](#)

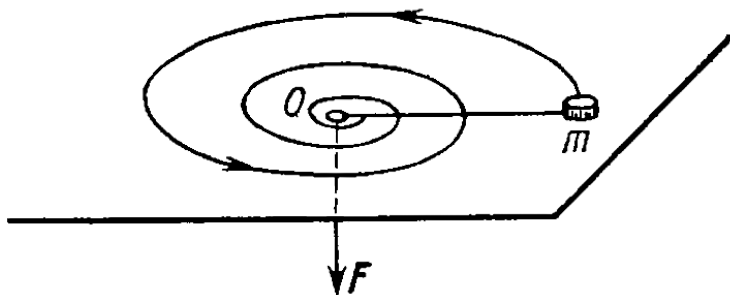
75. A small ball is suspended from a point O by a light thread of length  $l$ . Then the ball is drawn aside so that thread deviates through an angle  $\theta$  from the vertical and set in motion in a horizontal direction at right angles to the vertical plane in which the thread is located. What is the initial velocity that has to be imparted to the ball so that it could deviate through the maximum angle  $\pi/2$  in the process of motion?



**Watch Video Solution**

**76.** A small body of mass  $m$  tied to a non-stretchable thread moves over a smooth horizontal plane. The other end of the thread is being drawn into a hole  $O$ (figure) with a constant velocity. Find the thread tension as a function of the distance  $r$  between the body and the hole if at  $r = r_0$  the angular velocity

of the thread is equal to  $\omega_0$ .



[Watch Video Solution](#)

77. A light non-stretchable thread is wound on a massive fixed pulley of radius  $R$ . A small body of mass  $m$  is tied to the free end of the thread. At a moment  $t = 0$  the system is released and starts moving. Find its angular momentum relative to the pulley axle as a function of time  $t$ .



**Watch Video Solution**

**78.** A uniform sphere of mass  $m$  and radius  $R$  starts rolling without slipping down an inclined plane at an angle  $\alpha$  to the horizontal. Find the time dependence of the angular momentum of the sphere relative to the point of contact at the initial moment. How will the obtained result change in the case of a perfectly smooth inclined plane?



**Watch Video Solution**



**79.** A certain system of particles possesses a total momentum  $p$  and an angular momentum  $M$  relative to a point  $O$ . Find its angular momentum  $M'$  relative to a point  $O'$  whose position with respect to the point  $O$  is determined by the radius vector  $r_0$ . Find out when the angular momentum of the system of particles does not depend on the choice of the point  $O$ .



**Watch Video Solution**

**80.** Demonstrate that the angular momentum  $M$  of the system of particles relative to a point  $O$  of the reference frame  $K$  can be represented as

$$M = \widetilde{M} + [r_C p],$$

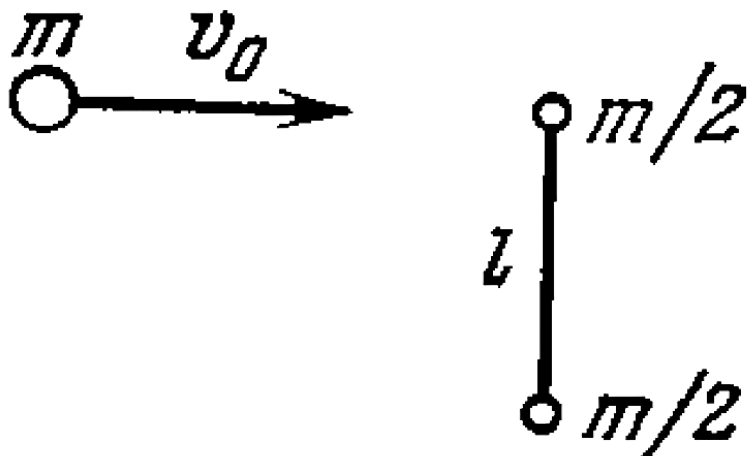
where  $\widetilde{M}$  is its proper angular momentum (in the reference frame moving translationally and fixed to the centre of inertia),  $r_C$  is the radius vector of the centre of inertia relative to the point  $O$ ,  $p$  is the total momentum of the system of particles in the reference frame  $K$ .



**View Text Solution**

**81.** A ball of mass  $m$  moving with velocity  $v_0$  experiences a head-on elastic collision with one of the spheres of a stationary rigid dumbbell as shown in figure. The mass of each sphere equals  $m/2$ , and the distance between them is  $l$ . Disregarding the size of the spheres, find the proper angular momentum  $\widetilde{M}$  of the dumbbell after the collision, i.e. the angular momentum in the reference frame moving translationally and fixed to the

dumbbell's centre of inertia.



[View Text Solution](#)

**82.** Two small identical discs, each of mass  $m$ , lie on a smooth horizontal plane. The discs are interconnected by a light non-deformed spring of length  $l_0$  and stiffness  $\kappa$ . At a certain moment one of the disc is set in motion in a horizontal direction perpendicular to the spring with velocity  $v_0$ . Find the maximum elongation of the spring in the process of motion, if it is known to be considerably less than unity.



**View Text Solution**

# Universal Gravitation

1. A planet of mass  $M$  moves along a circle around the Sun with velocity  $v = 34.9 \text{ km/s}$  (relative to the heliocentric reference frame). Find the period of revolution of this planet around the Sun.



[Watch Video Solution](#)

2. The Jupiter's period of revolution around the Sun is 12 times that of the Earth. Assuming

the planetary orbits to be circular, find:

(a) how many times the distance between the Jupiter and the Sun exceeds that between the Earth and the Sun,

(b) the velocity and the acceleration of Jupiter in the heliocentric reference frame.



[Watch Video Solution](#)

**3.** A planet of mass  $M$  moves around the Sun along an ellipse so that its minimum distance from the Sun is equal to  $r$  and the maximum

distance to R. Making use of Kepler's laws, find its period of revolution around the Sun.



[Watch Video Solution](#)

4. A small body starts falling onto the Sun from a distance equal to the radius of the Earth's orbit. The initial velocity of the body is equal to zero in the heliocentric reference frame. Making use of Kepler's laws, find how long the body will be falling.



[Watch Video Solution](#)



5. Suppose we have made a model of the Solar system scaled down in the ratio  $\eta$  but of materials of the same mean density as the actual materials of the planets and the Sun. How will the orbital periods of revolution of planetary models change in this case?



**Watch Video Solution**

6. A double star is a system of two stars moving around the centre of inertia of the

system due to gravitation. Find the distance between the components of the double star, if its total mass equals  $M$  and the period of revolution  $T$ .



[Watch Video Solution](#)

7. Find the potential energy of the gravitational interaction

(a) of two mass points of masses  $m_1$  and  $m_2$

located at a distance  $r$  from each other,

(b) of a mass point of mass  $m$  and a thin

uniform rod of mass  $M$  and length  $l$ , if they are located along a straight line at a distance  $a$  from each other, also find the force of their interaction.



[Watch Video Solution](#)

**8.** A planet of mass  $m$  moves along an ellipse around the Sun so that its maximum and minimum distances from the Sun are equal to  $r_1$  and  $r_2$  respectively. Find the angular

momentum  $M$  of this planet relative to the centre of the Sun.



[Watch Video Solution](#)

9. Using the conservation laws, demonstrate that the total mechanical energy of a planet of mass  $m$  moving around the Sun along an ellipse depends only on its semi-major axis  $a$ . Find this energy as a function of  $a$ .



[Watch Video Solution](#)

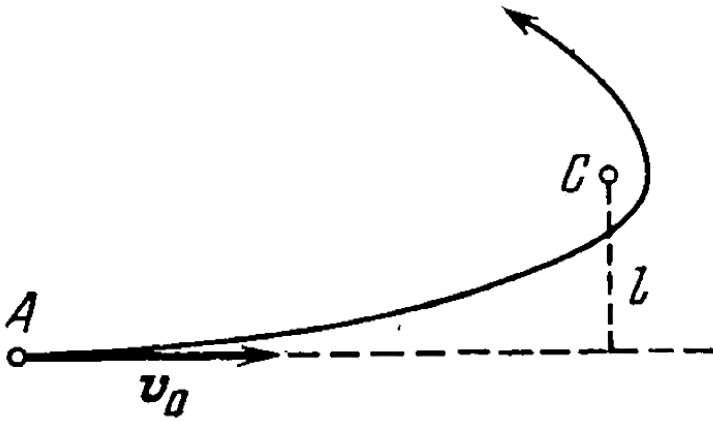
**10.** A planet A moves along an elliptical orbit around the Sun. At the moment when it was at the distance  $r_0$  from the Sun its velocity was equal to  $v_0$  and the angle between the radius vector  $r_0$  and the velocity vector  $v_0$  was equal to  $\alpha$ . Find the maximum and minimum distances that will separate this planet from the Sun during its orbital motion.



**Watch Video Solution**

**11.** A cosmic body A moves to the Sun with velocity  $v_0$  (when far from the Sun) and aiming parameter  $l$  the arm of the vector  $v_0$  relative to the centre of the Sun (figure). Find the minimum distance by which this body will get

to the Sun.



[View Text Solution](#)

**12.** A particle of mass  $m$  is located outside a uniform sphere of mass  $M$  at a distance  $r$  from its centre. Find:

(a) the potential energy of gravitational interaction of the particle and the sphere,

(b) the gravitational force which the sphere exerts on the particle.



**View Text Solution**



**13.** Demonstrate that the gravitational force acting on a particle A inside a uniform spherical layer of matter is equal to zero.



**Watch Video Solution**

**14.** A particle of mass  $m$  was transferred from the centre of the base of a uniform hemisphere of mass  $M$  and radius  $R$  into infinity.

What work was performed in the process by

the gravitational force exerted on the particle by the hemisphere?



[Watch Video Solution](#)

**15.** There is a uniform sphere of mass  $M$  and radius  $R$ . Find the strength  $G$  and the potential  $\varphi$  of the gravitational field of this sphere as a function of the distance  $r$  from its centre (with  $r < R$  and  $r > R$ ). Draw the approximate plots of the functions  $G(r)$  and  $\varphi(r)$ .



[View Text Solution](#)

**16.** Inside a uniform sphere of density  $\rho$  there is a spherical cavity whose centre is at a distance  $l$  from the centre of the sphere. Find the strength  $G$  of the gravitational field inside the cavity.



[Watch Video Solution](#)

**17.** A uniform sphere has a mass  $M$  and radius  $R$ . Find the pressure  $p$  inside the sphere,

caused by gravitational compression, as a function of the distance  $r$  from its centre. Evaluate  $p$  at the centre of the Earth, assuming it to be a uniform sphere.



[Watch Video Solution](#)

**18.** Find the proper potential energy of gravitational interaction of matter forming  
(a) a thin uniform spherical layer of mass  $m$  and radius  $R$ ,

(b) a uniform sphere of mass  $m$  and radius  $R$ (make use of the answer to Problem)



[Watch Video Solution](#)

**19.** Two Earth's satellites move in a common plane along circular orbits. The orbital radius of one satellite  $r = 700km$  while that of the other satellite is  $\Delta r = 70km$  less. What time interval separates the periodic approaches of the satellites to each other over the minimum distance?



[Watch Video Solution](#)

20. Calculate the ratios of the following accelerations: the acceleration  $w_1$  due to the gravitational force on the Earth's surface, the acceleration  $w_2$  due to the centrifugal force of inertia on the Earth's equator, and the acceleration  $w_3$  caused by the Sun to the bodies on the Earth.



[Watch Video Solution](#)

**21.** At what height over the Earth's pole the free-fall acceleration decreases by one per cent, by half?



**Watch Video Solution**

**22.** On the pole of the Earth a body is imparted velocity  $v_0$  directed vertically up. Knowing the radius of the Earth and the free-fall acceleration on its surface, find the height to

which the body will ascend. The air drag is to be neglected.



[Watch Video Solution](#)

**23.** An artificial satellite is launched into a circular orbit around the Earth with velocity  $v$  relative to the reference frame moving translationally and fixed to the Earth's rotation axis. Find the distance from the satellite to the Earth's surface. The radius of



the Earth and the free-fall acceleration on its surface are supposed to be known.



[Watch Video Solution](#)

**24.** Calculate the radius of the circular orbit of a stationary Earth's satellite, which remains motionless with respect to its surface. What are its velocity and acceleration in the inertial reference frame fixed at a given moment to the centre of the Earth?



[Watch Video Solution](#)

**25.** A satellite revolving in a circular equatorial orbit of radius  $R = 2.0 \times 10^4$  km from west to east appears over a certain point at the equator every  $11.6h$ . From these data, calculate the mass of the earth.

$$(G = 6.67 \times 10^{-11} Nm^2)$$



**Watch Video Solution**

**26.** A satellite revolves from east to west in a circular equatorial orbit of radius

$R = 1.00 \cdot 10^4 \text{ km}$  around the Earth. Find the velocity and the acceleration of the satellite in the reference frame fixed to the Earth.



[View Text Solution](#)

**27.** A satellite must move in the equatorial plane of the Earth close to its surface either in the Earth's rotation direction or against it. Find how many times the kinetic energy of the satellite in the latter case exceeds that in the

former case (in the reference frame fixed to the Earth).



[Watch Video Solution](#)

**28.** An artificial satellite of the Moon revolves in a circular orbit whose radius exceeds the radius of the Moon  $\eta$  times. In the process of motion the satellite experiences a slight resistance due to cosmic dust. Assuming the resistance force to depend on the velocity of the satellite as  $F = \alpha v^2$ , where  $\alpha$  is a

constant, find how long the satellite will stay in orbit until it falls onto the Moon's surface.



[View Text Solution](#)

**29.** Calculate the orbital and escape velocities for the Moon. Compare the results obtained with the corresponding velocities for the Earth.



[Watch Video Solution](#)

**30.** A spaceship approaches the Moon along a parabolic trajectory which is almost tangent to the Moon's surface. At the moment of the maximum approach the brake rocket was fired for a short time interval, and the spaceship was transferred into a circular orbit of a Moon satellite. Find how the spaceship velocity modulus increased in the process of braking.



**Watch Video Solution**

**31.** A spaceship is launched into a circular orbit close to the Earth's surface. What additional velocity has to be imparted to the spaceship to overcome the gravitational pull?



**Watch Video Solution**

**32.** At what distance from the centre of the Moon is the point at which the strength of the resultant of the Earth's and Moon's gravitational fields is equal to zero? The

Earth's mass is assumed to be  $\eta = 81$  times that of the Moon, and the distance between the centres of these planets  $n = 60$  times greater than the radius of the Earth  $R$ .



[View Text Solution](#)

**33.** What is the minimum work that has to be performed to bring a spaceship of mass  $m = 2.0 \cdot 10^3 \text{ kg}$  from the surface of the Earth to the Moon?



[Watch Video Solution](#)



**34.** Find approximately the third cosmic velocity  $v_3$ , i.e. the minimum velocity that has to be imparted to a body relative to the Earth's surface to drive it out of the Solar system. The rotation of the Earth about its own axis is to be neglected.

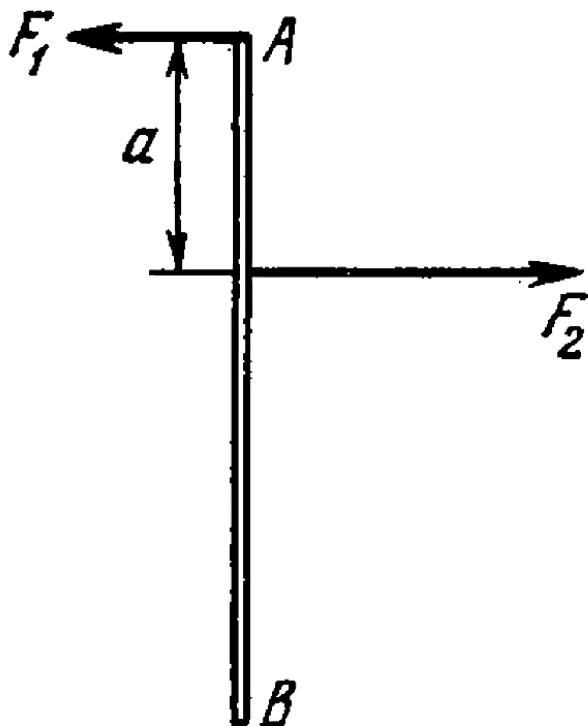


**Watch Video Solution**

**Dynamics Of A Solid Body**

1. A thin uniform rod AB of mass  $m = 1.0\text{kg}$  moves translationally with acceleration  $w = 2.0\text{m/s}^2$  due to two antiparallel forces  $F_1$  and  $F_2$  (figure). The distance between the points at which these forces are applied is equal to  $a = 20\text{cm}$ . Besides, it is known that

$F_2 = 5.0\text{N}$ . Find the length of the rod.



Watch Video Solution

2. A force  $F = Ai + Bj$  is applied to a point whose radius vector relative to the origin of coordinates O is equal to  $r = ai + bj$ , where  $a, b, A, B$  are constants, and  $i, j$  are the unit vectors of the  $x$  and  $y$  axes. Find the moment  $N$  and the arm  $l$  of the force  $F$  relative to the point O.

A. 
$$\frac{aB - Ab}{\sqrt{A^2 + B^2}}$$

B. 
$$\frac{aA - Bb}{\sqrt{A^2 + B^2}}$$

C. 
$$\frac{aB + Ab}{\sqrt{A^2 + B^2}}$$

D.  $\frac{Ab - aB}{\sqrt{A^2 + B^2}}$

**Answer: A**



**Watch Video Solution**

3. A force  $F_1 = Aj$  is applied to a point whose radius vector  $r_1 = ai$ , while a force  $F_2 = Bi$  is applied to the point whose radius vector  $r_2 = bj$ . Both radius vectors are determined relative to the origin of coordinates O,  $i$  and  $j$  are the unit vectors of the x and y axes,  $a, b, A,$

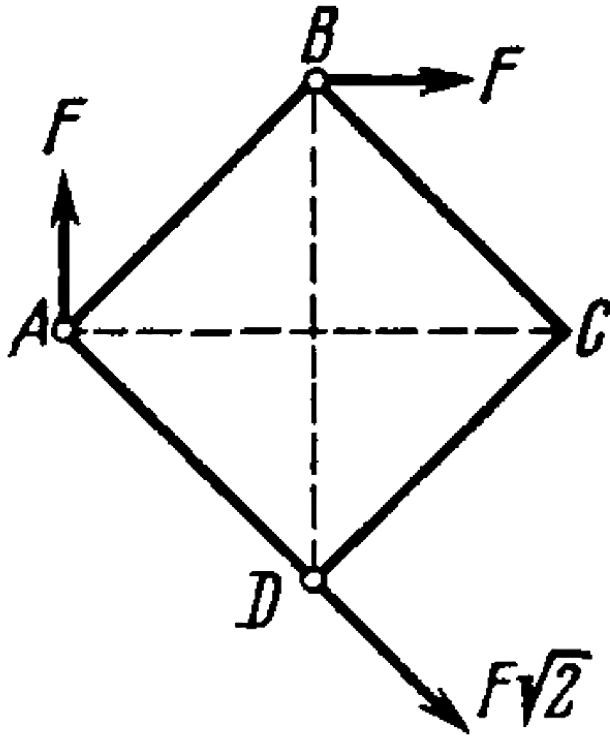
B are constants. Find the arm  $l$  of the resultant force relative to the point O.



[Watch Video Solution](#)

4. Three forces are applied to a square plate as shown in Figure. Find the modulus, direction, and the point of application of the resultant

force, if this point is taken on the side BC.



[Watch Video Solution](#)

## 5. Find the moment of inertia

(a) of a thin uniform rod relative to the axis which is perpendicular to the rod and passes through its end, if the mass of the rod is  $m$  and its length  $l$ ,

(b) of a thin uniform rectangular plate relative to the axis passing perpendicular to the plane of the plate through one of its vertices, if the sides of the plate are equal to  $a$  and  $b$ , and its mass is  $m$ .



[Watch Video Solution](#)



**6.** Calculate the moment of inertia

(a) of a copper uniform disc relative to the symmetry axis perpendicular to the plane of the disc, if its thickness is equal to  $b = 2.0\text{mm}$  and its radius to  $R = 100\text{mm}$ ,

(b) of a uniform solid cone relative to its symmetry axis, if the mass of the cone is equal to  $m$  and the radius of its base to  $R$ .



**Watch Video Solution**

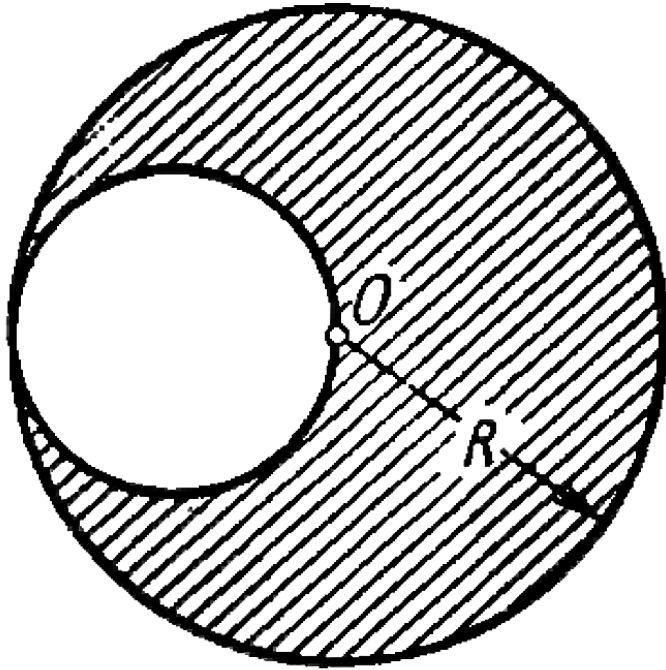
7. Demonstrate that in the case of a thin plate of arbitrary shape there is the following relationship 1, 2, and 3 define three mutually perpendicular axes passing through one point, with axes 1 and 2 lying in the plane of the plate. Using this relationship, find the moment of inertia of a thin uniform round disc of radius  $R$  and mass  $m$  relative to the axis coinciding with one of its diameters.



[View Text Solution](#)

8. A uniform disc of radius  $R = 20\text{cm}$  has a round cut as shown in figure. The mass of the remaining (shaded) portion of the disc equals  $m = 7.3\text{kg}$ . Find the moment of inertia of such a disc relative to the axis passing through its centre of inertia and

perpendicular to the plane of the disc.



**Watch Video Solution**

9. Using the formula for the moment of inertia of a uniform sphere, find the moment of inertia of a thin spherical layer of mass  $m$  and radius  $R$  relative to the axis passing through its centre.



[Watch Video Solution](#)


10. A light thread with a body of mass  $m$  tied to its end is wound on a uniform solid cylinder of mass  $M$  and radius  $R$ . At a moment  $t = 0$

the system is set in motion. Assuming the friction in the axle of the cylinder to be negligible, find the time dependence of

(a) the angular velocity of the cylinder and

(b) the kinetic energy of the whole system (

$M = 2m$ ).



Watch Video Solution

**11.** The ends of thin threads tightly wound on the axle of radius  $r$  of the Maxwell disc are attached to a horizontal bar. When the disc unwinds, the bar is raised to keep the disc at the same height. The mass of the disc with the axle is equal to  $m$ , the moment of inertia of the arrangement relative to its axis is  $I$ . Find the tension of each thread and the acceleration of the bar.



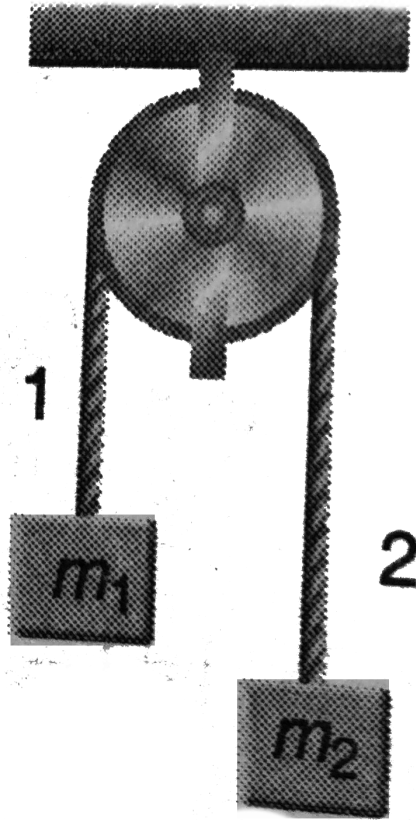
**Watch Video Solution**



**12.** A thin horizontal uniform rod AB of mass  $m$  and length  $l$  can rotate freely about a vertical axis passing through its end A. At a certain moment the end B starts experiencing a constant force  $F$  which is always perpendicular to the original position of the stationary rod and directed in a horizontal plane. Find the angular velocity of the rod as a function of its rotation angle  $\varphi$  counted relative to the initial position.



**Watch Video Solution**



13.

In the arrangement shown in figure the mass of the uniform solid cylindrical pulley of radius  $R$  is equal to  $m$  and the masses of two bodies are equal to  $m_1$  and  $m_2$ . The thread slipping

and the friction in the axle of the pulley are supposed to be absent. Find the angular acceleration of the cylinder and the ratio of tensions  $\frac{T_1}{T_2}$  of the vertical sections of the thread in the process of motion.

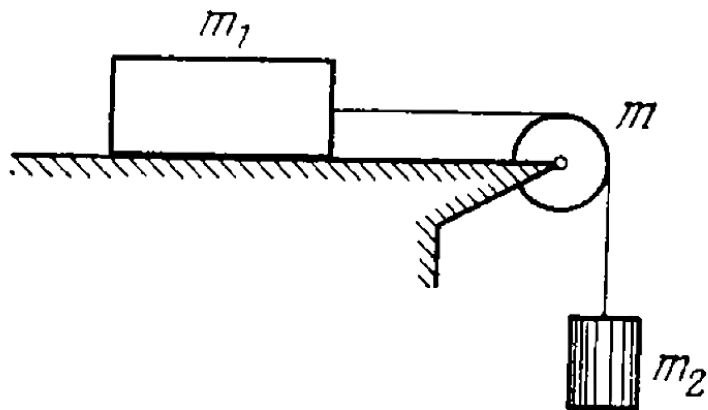


[Watch Video Solution](#)

**14.** In the system shown in figure the masses of the bodies are known to be  $m_1$  and  $m_2$ , the coefficient of friction between the body  $m_1$  and the horizontal plane is equal to  $k$ , and a

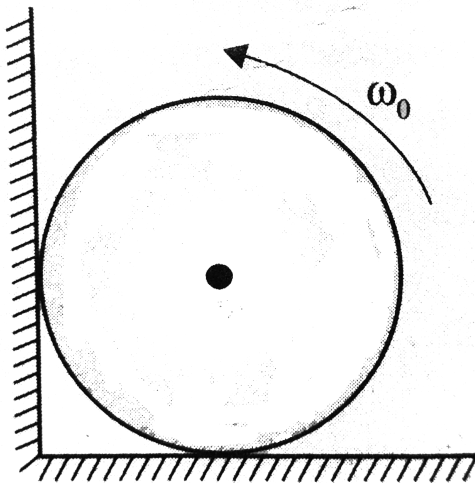
pulley of mass  $m$  is assumed to be a uniform disc. The thread does not slip over the pulley. At the moment  $t = 0$  the body  $m_2$  starts descending. Assuming the mass of the thread and the friction in the axle of the pulley to be negligible, find the work performed by the friction forces acting on the body  $m_1$  over the

first  $t$  seconds after the beginning of motion.



**Watch Video Solution**

15. A uniform cylinder of radius  $R$  is spun about its axis to the angular velocity  $\omega_0$  and then placed into a corner. The coefficient of friction between the corner walls and the cylinder is  $\mu_k$ . How many turns will the cylinder accomplish before it stops?



Watch Video Solution

**16.** A uniform disc of radius  $R$  is spinned to the angular velocity  $\omega$  and then carefully placed on a horizontal surface. How long will the disc be rotating on the surface if the friction coefficient is equal to  $k$ ? The pressure exerted by the disc on the surface can be neglected as uniform.



**Watch Video Solution**

**17.** A flywheel with the initial angular velocity  $\omega_0$  decelerates due to the forces whose moment relative to the axis is proportional to the square root of its angular velocity. Find the mean angular velocity of the flywheel averaged over the total deceleration time.



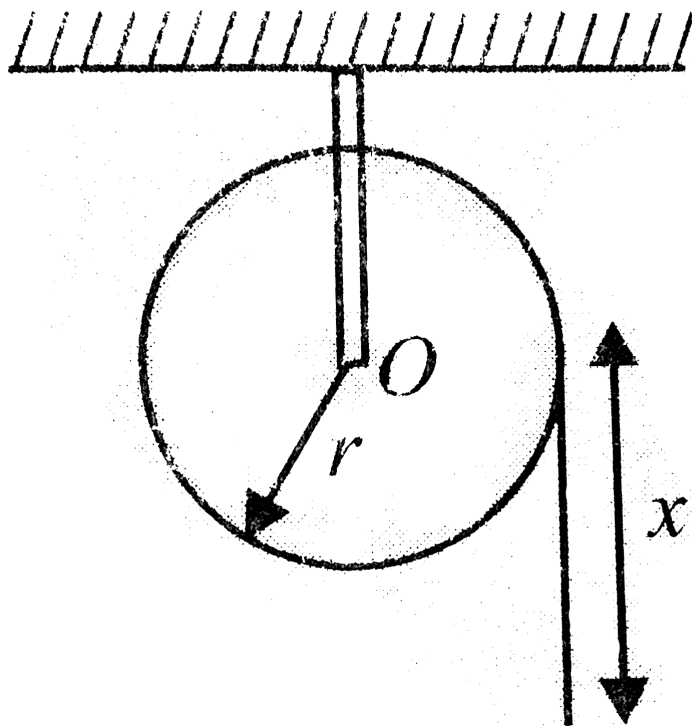
**Watch Video Solution**

**18.** A uniform cylinder of radius  $r$  and mass  $m$  can rotate freely about a fixed horizontal axis.



A thin cord of length  $l$  and mass  $m_0$  is wound on the cylinder in a single layer. Find the angular acceleration of the cylinder as a function of the length  $x$  of the hanging part of the end. The wound part of the cord is supposed to have its centre of gravity on the

cylinder axis is shown in figure.



[Watch Video Solution](#)

**19.** A uniform sphere of mass  $m$  and radius  $R$  rolls without slipping down an inclined plane set at an angle  $\theta$  to the horizontal. Find

(a) the friction coefficient at which slipping is absent,

(b) the kinetic energy of the sphere  $t$  seconds after the beginning of motion.



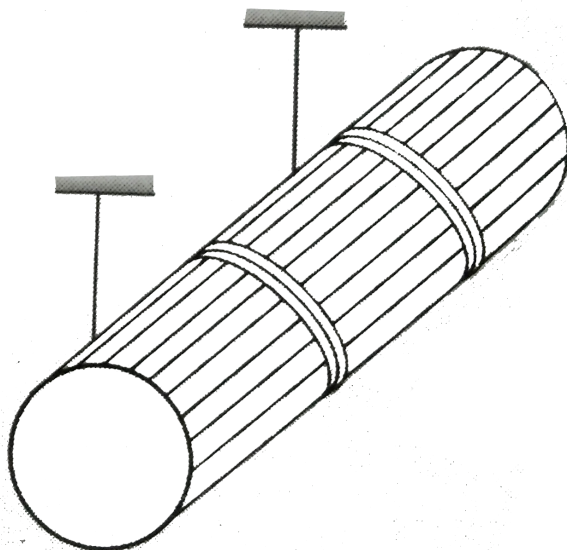
**Watch Video Solution**

**20.** A uniform cylinder of mass  $m$  and radius  $R$  starts descending at a moment  $t = 0$  due to gravity, Neglecting the mass of the thread, find

(a) the tension of each thread and the angular acceleration of the cylinder,

(b) the time dependence of the instantaneous

power developed by the gravitational force.



[Watch Video Solution](#)

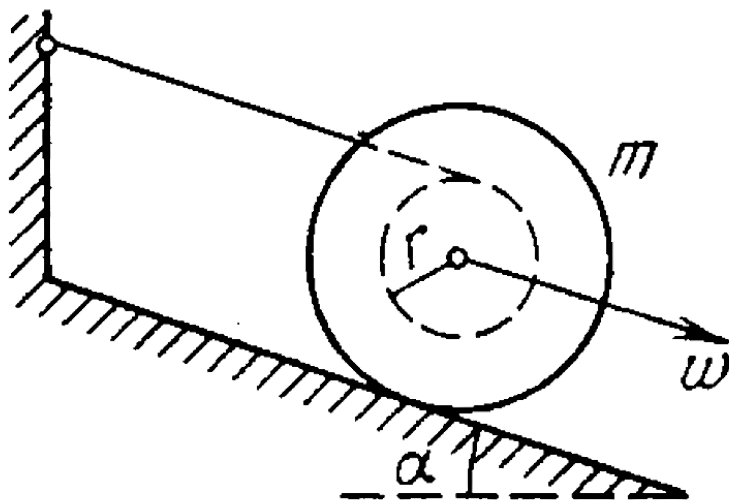
**21.** Thin threads are tightly wound on the ends of a uniform solid cylinder of mass  $m$ . The free ends of the threads are attached to the ceiling

of an elevator car. The car starts going up with an acceleration  $w_0$ . Find the acceleration  $w'$ . Find the acceleration  $w'$  of the cylinder relative to the car and the force  $F$  exerted by the cylinder on the ceiling (through the threads).

 [View Text Solution](#)

**22.** A spool with a thread wound on it is placed on an inclined smooth plane set an angle  $\alpha = 30^\circ$  to the horizontal. The free end of the

thread is attached to the wall as shown in figure. The mass of the spool is  $m = 200g$ , its moment of inertia relative to its own axis  $I = 0.45g \cdot m^2$ , the radius of the wound thread layer  $r = 3.0cm$ . Find the acceleration of the spool axis.





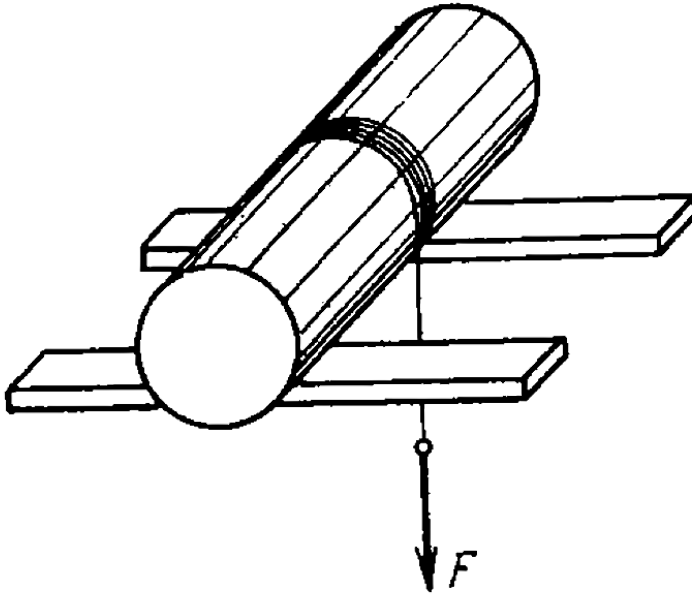
Watch Video Solution

**23.** A uniform solid cylinder of mass  $m$  rests on two horizontal planks. A thread is wound on the cylinder. The hanging end of the thread is pulled vertically down with a constant force  $F$  (figure).

Find the maximum magnitude of the force  $F$  which still does not bring about any sliding of the cylinder, if the coefficient of friction between the cylinder and the planks is equal to  $k$ . What is the acceleration  $w_{\max}$  of the axis



of the cylinder rolling down the inclined plane?



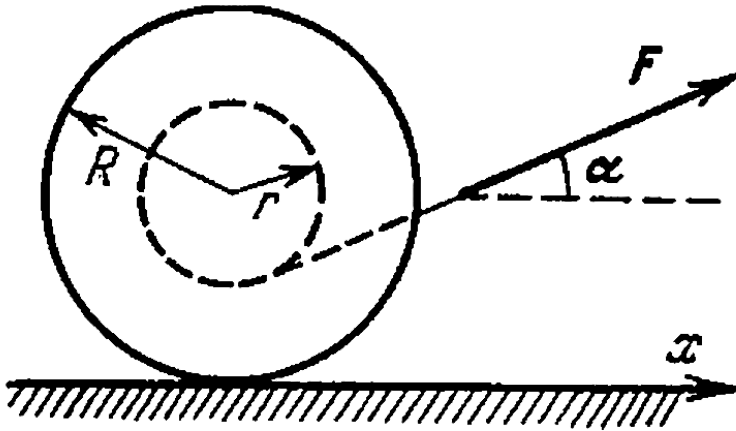
**Watch Video Solution**

24. A spool with thread wound on it, of mass  $m$ , rests on a rough horizontal surface. Its moment of inertia relative to its own axis is equal to  $I = \gamma m R^2$ , where  $\gamma$  is a numerical factor, and  $R$  is the outside radius of the spool. The radius of the wound thread layer is equal to  $r$ . The spool is pulled without sliding by the thread with a constant force  $F$  directed at an angle  $\alpha$  to the horizontal (figure). Find:

(a) the projection of the acceleration vector of the spool axis on the x-axis,

(b) the work performed by the force  $F$  during

the first  $t$  seconds after the beginning of motion.

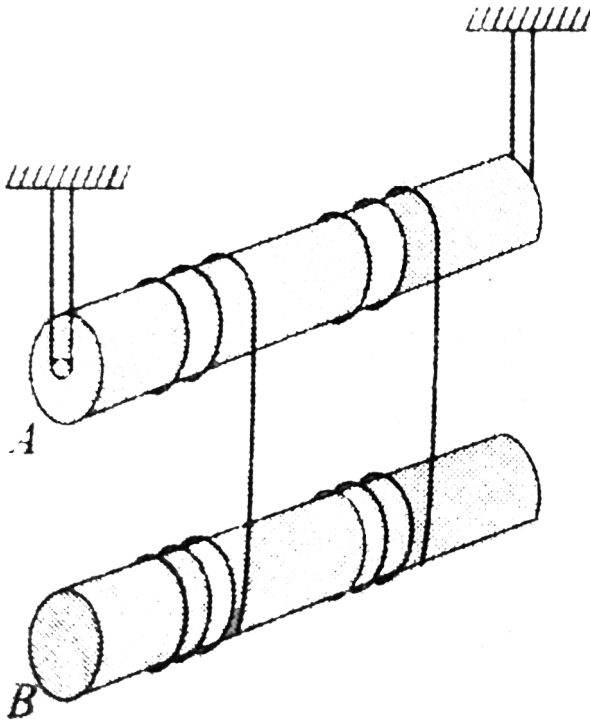


[Watch Video Solution](#)

**25.** The arrangement shown in figure consists of two identical, uniform, solid cylinders, each of mass  $m$ , on which two light threads are wound symmetrically.

Find the tensions of each thread in the process of motion. The friction in the axle of

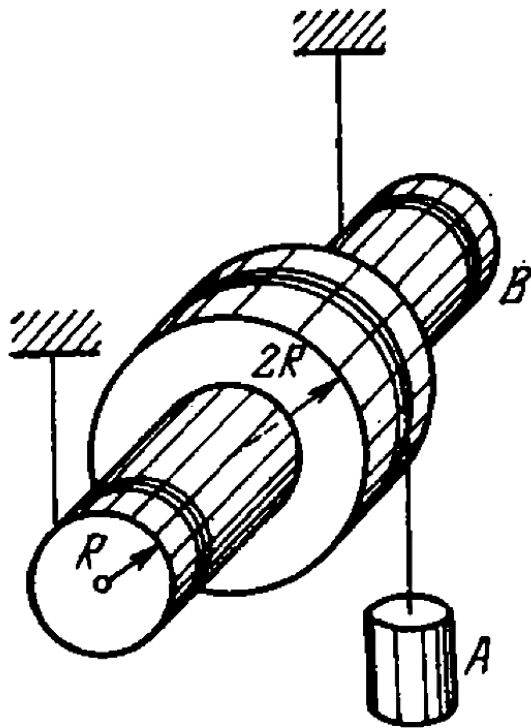
the upper cylinder is assumed to be absent.



**Watch Video Solution**

**26.** In the arrangement shown in figure a weight A possesses mass  $m$ , a pulley B possesses mass  $M$ . Also known are the moment of inertia  $I$  of the pulley relative to its axis and the radii of the pulley  $R$  and  $2R$ . The mass of the threads is negligible. Find the acceleration of the weight A after the system

is set free.



[Watch Video Solution](#)

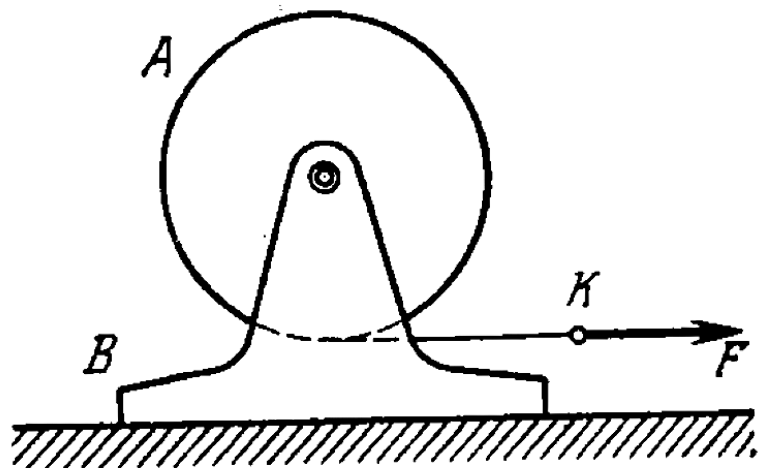
27. A uniform solid cylinder A of mass  $m_1$  can freely rotate about a horizontal axis fixed to a mount B of mass  $m_2$ (figure). A constant horizontal force  $F$  is applied to the end K of a light thread tightly wound on the cylinder. The friction between the mount and the supporting horizontal plane is assumed to be absent. Find:

(a) the acceleration of the point K,

(b) the kinetic energy of this system  $t$  seconds



after the beginning of motion.



[Watch Video Solution](#)

**28.** A plank of mass  $m_1$  with a uniform sphere of mass  $m_2$  placed on it rests on a smooth horizontal plane. A constant horizontal force  $F$  is applied to the plank. With what acceleration will the plank and the centre of the sphere move provided there is no sliding between the plank and the sphere?



**Watch Video Solution**

**29.** A uniform solid cylinder of mass  $m$  and radius  $R$  is set in rotation about its axis with an angular velocity  $\omega_0$ , then lowered with its lateral surface onto a horizontal plane and released. The coefficient of friction between the cylinder and the plane is equal to  $\mu$ . Find

(a) how long the cylinder will move with sliding,

(b) the total work performed by the sliding friction force acting on the cylinder.



**Watch Video Solution**

**30.** A uniform ball of radius  $r$  rolls without slipping down from the top of a sphere of radius  $R$ . Find the angular velocity of the ball at the moment it breaks off the sphere. The initial velocity of the ball is negligible.



**Watch Video Solution**

**31.** A uniform solid cylinder of radius  $R = 15\text{cm}$  rolls over a horizontal plane passing into an inclined plane forming an

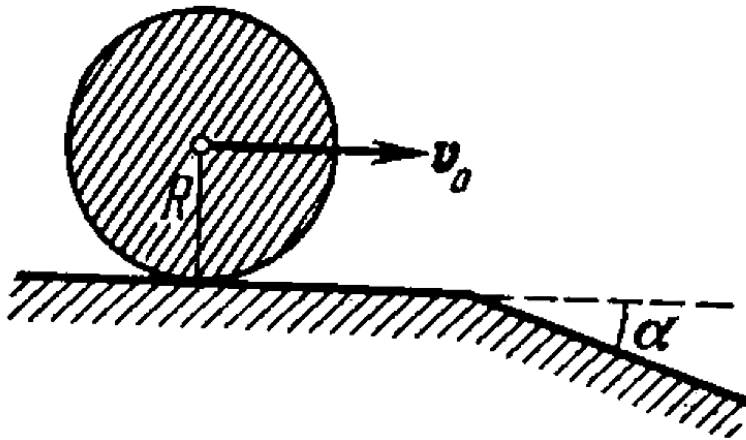
angle  $\alpha = 30^\circ$  with the horizontal (figure).

Find the maximum value of the velocity  $v_0$

which still permits the cylinder to roll onto the

inclined plane section without a jump. The

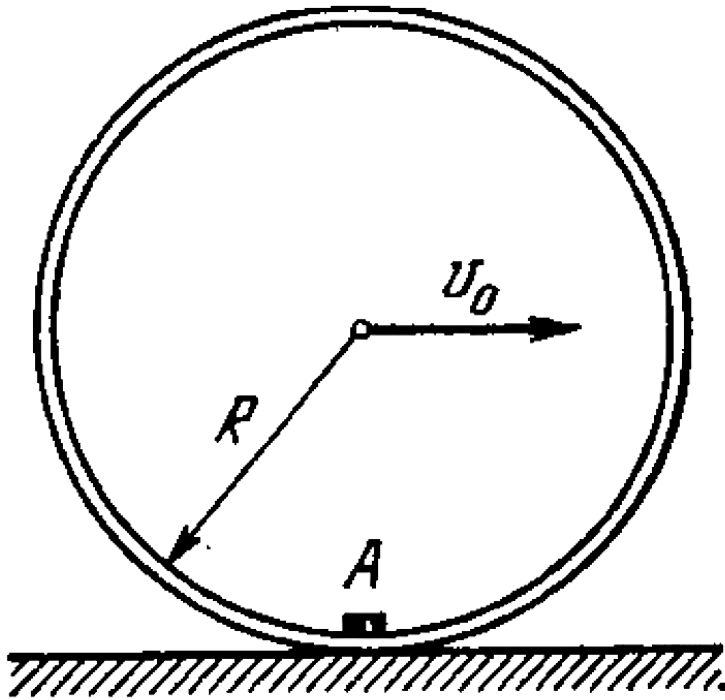
sliding is assumed to be absent.



Watch Video Solution

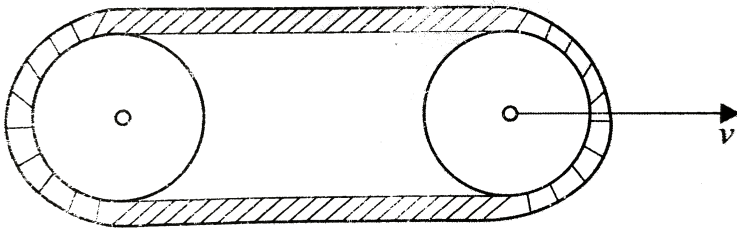
**32.** A small body A is fixed to the inside of a thin rigid hoop of radius  $R$  and mass equal to that of the body A. The hoop rolls without slipping over a horizontal plane, at the moments when the body A gets into the lower position, the centre of the hoop moves with velocity  $v_0$ (figure). At what values of  $v_0$  will the

hoop move without bouncing?



Watch Video Solution

**33.** Calculate the kinetic energy of a tractor crawler belt of mass  $m$  if the tractor moves with a velocity  $v$ . There is no slipping. Neglect the size of the wheels.



**Watch Video Solution**

**34.** A uniform sphere of mass  $m$  and radius  $r$  rolls without sliding over a horizontal plane,



rotating about a horizontal axle  $OA$ . In the process, the centre of the sphere moves with a velocity  $v$  along a circle of radius  $R$ . Find the kinetic energy of the sphere.



[Watch Video Solution](#)

**35.** Demonstrate that in the reference frame rotating with a constant angular velocity  $\omega$  about a stationary axis a body of mass  $m$  experiences the resultant

(a) centrifugal force of inertia  $F_{cf} = m\omega^2 R_C$ ,

where  $R_C$  is the radius vector of the body's centre of inertia relative to the rotation axis,

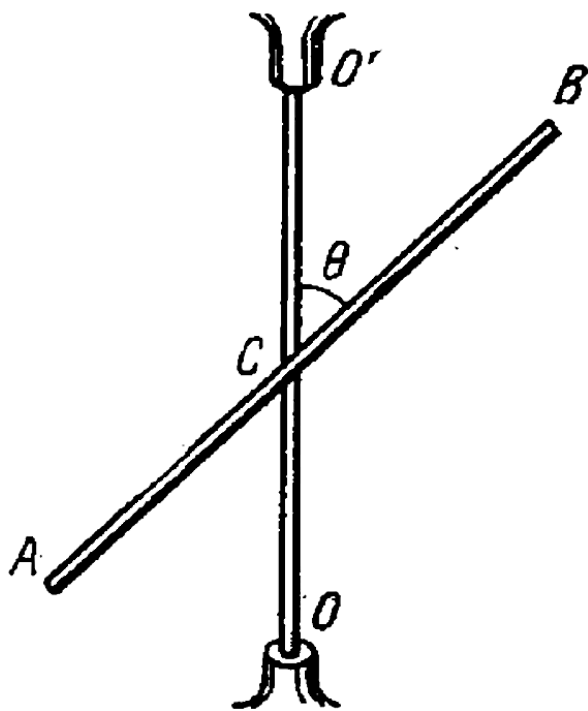
(b) Coriolis force  $F'_{c \text{ or}} = 2m[v'_C\omega]$ , where  $v'_C$  is the velocity of the body's centre of inertia in the rotating reference frame.



[View Text Solution](#)

**36.** A midpoint of a thin uniform rod AB of mass  $m$  and length  $l$  is rigidly fixed to a rotation axle  $OO'$  as shown in figure. The rod is set into rotation with a constant angular

velocity  $\omega$ . Find the resultant moment of the centrifugal forces of inertia relative to the point C in the reference frame fixed to the axle  $OO'$  and to the end.



[Watch Video Solution](#)

**37.** A conical pendulum, a thin uniform rod of length  $l$  and mass  $m$ , rotates uniformly about a vertical axis with angular velocity  $\omega$  (the upper end of the rod is hinged). Find the angle  $\theta$  between the rod and the vertical.



**Watch Video Solution**

**38.** A uniform cube with edge  $a$  rests on a horizontal plane whose friction coefficient equals  $k$ . The cube is set in motion with an

initial velocity, travels some distance over the plane and comes to a stand still. Explain the disappearance of the angular momentum of the cube relative to the axis lying in the plane at right angles to the cube's motion direction. Find the distance between the resultants of gravitational forces and the reaction forces exerted by the supporting plane.



**Watch Video Solution**

**39.** A smooth uniform rod AB of mass  $M$  and length  $l$  rotates freely with an angular velocity  $\omega_0$  in a horizontal plane about a stationary vertical axis passing through its end A. A small sleeve of mass  $m$  starts sliding along the rod from the point A. Find the velocity  $v'$  of the sleeve relative to the rod at the moment it reaches its other end B.



**Watch Video Solution**

**40.** A uniform rod of mass  $m = 5.0\text{kg}$  and length  $l = 90\text{cm}$  rests on a smooth horizontal surface. One of the ends of the rod is struck with the impulse  $J = 3.0\text{N} \cdot \text{s}$  in a horizontal direction perpendicular to the rod. As a result, the rod obtains the momentum  $p = 3.0\text{N} \cdot \text{s}$ . Find the force with which one half of the rod will act on the other in the process of motion.



**Watch Video Solution**

**41.** A thin uniform square plate with side  $l$  and mass  $M$  can rotate freely about a stationary vertical axis coinciding with one of its sides. A small ball of mass  $m$  flying with velocity  $v$  at right angles to the plate strikes elastically the centre of it. Find:

- (a) the velocity of the ball  $v'$  after the impact,
- (b) the horizontal component of the resultant force which the axis will exert on the plate after the impact.



**Watch Video Solution**



**42.** A vertically oriented uniform rod of mass  $M$  and length  $l$  can rotate about its upper end. A horizontally flying bullet of mass  $m$  strikes the lower end of the rod and gets stuck in it, as a result, the rod swings through an angle  $\alpha$ .

Assuming that  $m \ll M$ , find:

- (a) the velocity of the flying bullet,
- (b) the momentum increment in the system "bullet-rod" during the impact, what causes the change of that momentum,
- (c) at what distance  $x$  from the upper end of the rod the bullet must strike for the

momentum of the system "bullet-rod" to remain constant during the impact.



[Watch Video Solution](#)

**43.** A horizontally oriented uniform disc of mass  $M$  and radius  $R$  rotates freely about a stationary vertical axis passing through its centre. The disc has a radial guide along which can slide without friction a small body of mass  $m$ . A light thread running down through the hollow axle of the disc is tied to the body

initially the body was located at the edge of the disc and the whole system rotated with angular velocity  $\omega_0$ . Then by means of a force  $F$  applied to the lower end of the thread the body was slowly pulled to the rotation axis. find:

(a). The angular velocity of the system in its final state.

(b). The work performed by the force  $F$ .



[Watch Video Solution](#)

**44.** A man of mass  $m_1$  stands on the edge of a horizontal uniform disc of mass  $m_2$  and radius  $R$  which is capable of rotating freely about a stationary vertical axis passing through its centre. At a certain moment the man starts moving along the edge of the disc, he shifts over an angle  $\varphi'$  relative to the disc and then stops. In the process of motion the velocity of the man varies with time as  $v'(t)$ .

Assuming the dimensions of the man to be negligible, find:

(a) the angle through which the disc had

turned by the moment the man stopped,

(b) the force moment (relative to the rotation axis) with which the man acted on the disc in the process of motion.



[Watch Video Solution](#)

**45.** Two horizontal discs rotate freely about a vertical axis passing through their centres. The moments of inertia of the discs relative to this axis are equal to  $I_1$  and  $I_2$ , and the angular velocities to  $\omega_1$  and  $\omega_2$ . When the upper disc

fell on the lower one, both discs began rotating, after some time, as a single whole (due to friction). Find:

(a) the steady-state angular rotation velocity of the discs,

(b) the work performed by the friction forces in this process.



[Watch Video Solution](#)

**46.** A small disc and a thin uniform rod of length  $l$ , whose mass is  $\eta$  times greater than

the mass of the disc, lie on a smooth horizontal plane. The disc is set in motion, in horizontal direction and perpendicular to the rod, with velocity  $v$ , after which it elastically collides with the end of the rod. Find the velocity of the disc and the angular velocity of the rod after the collision. At what value of  $\eta$  will the velocity of the disc after the collision be equal to zero? reverse its direction?



**Watch Video Solution**

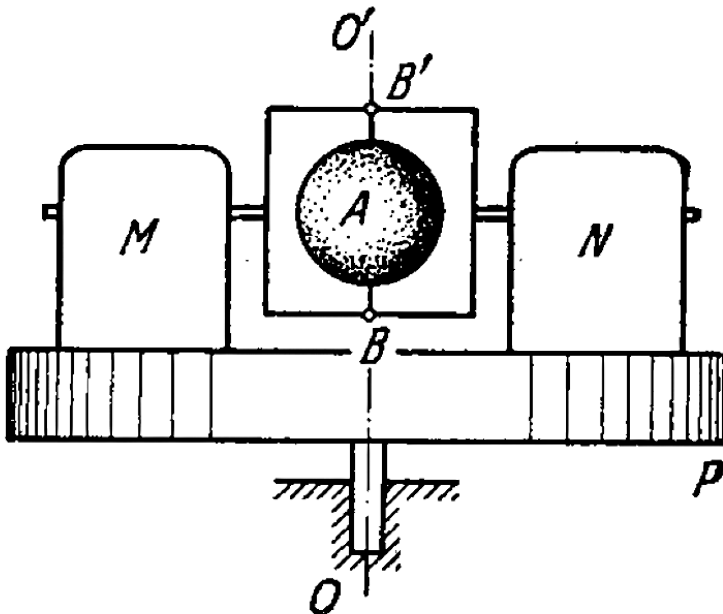
47. A stationary platform P which can rotate freely about a vertical axis (figure) supports a motor M and a balance weight N. The moment of inertia of the platform with the motor and the balance weight relative to this axis is equal to  $I$ . A light frame is fixed to the motor's shaft with a uniform sphere A rotating freely with an angular velocity  $\omega_0$  about a shaft  $BB'$  coinciding with the axis  $OO'$ . The moment of inertia of the sphere relative to the rotation axis is equal to  $I_0$ . Find

(a) the work performed by the motor in



turning the shaft  $BB'$  through  $90^\circ$ , through  $180^\circ$ ,

(b) the moment of external forces which maintains the axis of the arrangement in the vertical position after the motor turns the shaft  $BB'$  through  $90^\circ$ .





Watch Video Solution

**48.** A horizontally oriented uniform rod AB of mass  $m = 1.40\text{kg}$  and length  $l_0 = 100\text{cm}$  rotates freely about a stationary vertical axis  $OO'$  passing through its end A. The point A is located at the middle of the axis  $OO'$  whose length is equal to  $l = 55\text{cm}$ . At what angular velocity of the rod the horizontal component of the force acting on the lower end of the axis  $OO'$  is equal to zero? What is in this case

the horizontal component of the force acting on the upper end of the axis?



[Watch Video Solution](#)

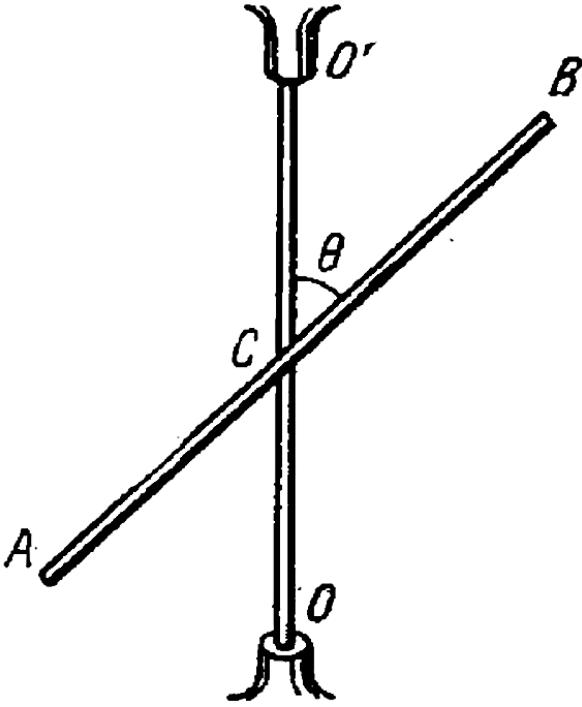
**49.** The middle of a uniform rod of mass  $m$  and length  $l$  is rigidly fixed to a vertical axis  $OO'$  so that the angle between the rod and the axis is equal to  $\theta$  (figure). The ends of the axis  $OO'$  are provided with bearings. The system rotates without friction with an angular velocity  $\omega$ . Find:

(a) the magnitude and direction of the rod's angular momentum  $M$  relative to the point  $C$ , as well as its angular momentum relative to the rotation axis,

(b) how much the modulus of the vector  $M$  relative to the point  $C$  increases during a half-turn,

(c) the moment of external forces  $N$  acting on

the axle  $OO'$  in the process of rotation.



[View Text Solution](#)

50. A top of mass  $m = 0.50\text{kg}$ , whose axis is tilted by an angle  $\theta = 30^\circ$  to the vertical, precesses due to gravity. The moment of inertia of the top relative to its symmetry axis is equal to  $I = 2.0g \cdot m^2$ , the angular velocity of rotation about that axis is equal to  $\omega = 350\text{rad}/s$ , the distance from the point of rest to the centre of inertia of the top is  $l = 10\text{cm}$ . Find:

- (a) the angular velocity of the top's precession,
- (b) the magnitude and direction of the

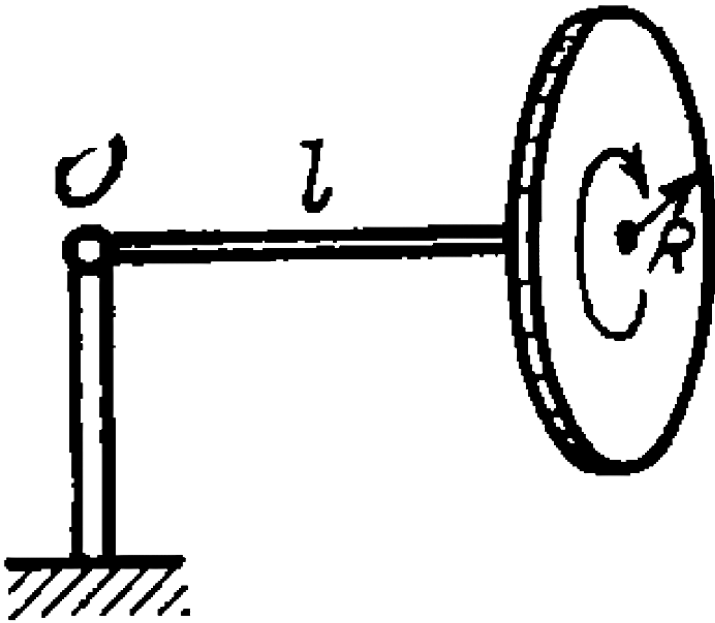
horizontal component of the reaction force acting on the top at the point of rest.



[Watch Video Solution](#)

51. A gyroscope, a uniform disc of radius  $R = 5.0\text{cm}$  at the end of a rod of length  $l = 10\text{cm}$  (figure), is mounted on the floor of an elevator car going up with a constant acceleration  $w = 2.0\text{m/s}^2$ . The other end of the rod is hinged at the point O. The gyroscope precesses with an angular velocity

$n = 0.5 \text{ rps}$ . Neglecting the friction and the mass of the rod, find the proper angular velocity of the disc.



[View Text Solution](#)



52. A top of mass  $m = 1.0\text{kg}$  and moment of inertia relative to its own axis  $I = 4.0\text{g} \cdot \text{m}^2$  spins with an angular velocity  $\omega = 310\text{rad/s}$ . Its point of rest is located on a block which is shifted in a horizontal direction with a constant acceleration  $w = 1.0\text{m/s}^2$ . The distance between the point of rest and the centre of inertia of the top equals  $l = 10\text{cm}$ . Find the magnitude and direction of the angular velocity of precession  $\omega'$ .



[View Text Solution](#)

53. A uniform sphere of mass  $m = 5.0\text{kg}$  and radius  $R = 6.0\text{cm}$  rotates with an angular velocity  $\omega = 1250\text{rad/s}$  about a horizontal axle passing through its centre and fixed on the mounting base by means of bearings. The distance between the bearings equals  $l = 15\text{cm}$ . The base is set in rotation about a vertical axis with an angular velocity  $\omega' = 5.0\text{rad/s}$ . Find the modulus and direction of the gyroscopic forces.



[Watch Video Solution](#)

54. A cylindrical disc of a gyroscope of mass  $m = 15\text{kg}$  and radius  $r = 5.0\text{cm}$  spins with an angular velocity  $\omega = 330\text{rad/s}$ . The distance between the bearings in which the axle of the disc is mounted is equal to  $l = 15\text{cm}$ . The axle is forced to oscillate about a horizontal axis with a period  $T = 1.0\text{s}$  and amplitude  $\varphi_m = 20^\circ$ . Find the maximum value of the gyroscopic forces exerted by the axle on the bearings.



[View Text Solution](#)

55. A ship moves with velocity  $v = 36\text{km}$  per hour along an arc of a circle of radius  $R = 200\text{m}$ . Find the moment of the gyroscopic forces exerted on the bearings by the shaft with a flywheel whose moment of inertia relative to the rotation axis equals  $I = 3.8 \cdot 10^3\text{kg} \cdot \text{m}^2$  and whose rotation velocity  $n = 300\text{r} \pm$ . The rotation axis is oriented along the length of the ship.



[Watch Video Solution](#)

**56.** A locomotive is propelled by a turbine whose axle is parallel to the axes of wheels. The turbine's rotation direction coincides with that of wheels. The moment of inertia of the turbine rotor relative to its own axis is equal to  $I = 240 \text{ kg} \cdot \text{m}^2$ . Find the additional force exerted by the gyroscopic forces on the rails when the locomotive moves along a circle of radius  $R = 250 \text{ m}$  with velocity  $v = 50 \text{ km}$  per hour. The gauge is equal to  $l = 1.5 \text{ m}$ . The angular velocity of the turbine equals  $n = 1500 \text{ r} \pm$ .



[Watch Video Solution](#)

## Elastic Deformation Of A solid Body

1. What pressure has to be applied to the ends of a steel cylinder to keep its length constant on raising its temperature by  $100.^\circ C$  ?



[Watch Video Solution](#)

2. What internal pressure (in the absence of an external pressure) can be sustained

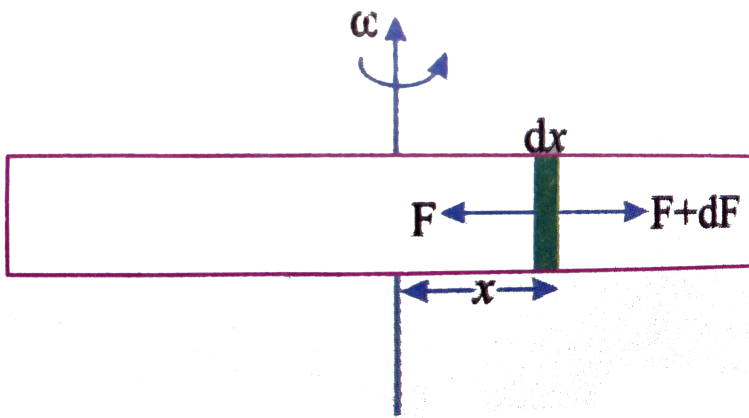
(a) by a glass tube, (b) by a glass spherical flask, if in both cases the wall thickness is equal to  $\Delta r = 1.0\text{mm}$  and the radius of the tube and the flask equals  $r = 25\text{mm}$ ?



[View Text Solution](#)

3. A horizontally orientied unifrom copper rod of length  $l$  is rotating about a vertical axis

passing through its centre. Calculate the rotated frequency at which the rod ruptures. Breaking or rupture strength of copper is  $\sigma$  and density of copper is  $\rho$ .



[Watch Video Solution](#)



4. A ring of radius  $r = 25\text{cm}$  made of lead wire is rotated about a stationary vertical axis passing through its centre and perpendicular to the plane of the ring. What is the number of rps at which the ring ruptures?



[View Text Solution](#)

5. A steel wire of diameter  $d = 1.0\text{mm}$  is stretched horizontally between two clamps located at the distance  $l = 2.0\text{m}$  from each

other. A weight of mass  $m = 0.25\text{kg}$  is suspended from the mid-point O of the wire. What will the resulting descent of the point O be in centrimetres?



[Watch Video Solution](#)

6. A uniform elastic plank moves due to a constant force  $F_0$  applied at one end whose area is  $S$ . The Young's modulus of the plank is  $Y$ . The strain produced in the direction of force is



[Watch Video Solution](#)

7. A thin uniform copper rod of length  $l$  and mass  $m$  rotates uniformly with an angular velocity  $\omega$  in a horizontal plane about a vertical axis passing through one of its ends. Determine the tension in the rod as a function of the distance  $r$  from the rotation axis. Find the elongation of the rod.



[Watch Video Solution](#)

8. A solid copper cylinder of length  $l = 65\text{cm}$  is placed on a horizontal surface and subjected to a vertical compressive force  $F = 1000\text{N}$  directed downward and distributed uniformly over the end face. What will be the resulting change of the volume of the cylinder in cubic millimeters?



**Watch Video Solution**

**9.** A copper rod of length  $l$  is suspended from the ceiling by one of its ends. Find:

(a) the elongation  $\Delta l$  of the rod due to its own weight ,

(b) the relative increment of its volume  $\Delta V / V$ .



**Watch Video Solution**

**10.** A bar made of material whose Young's modulus is equal to  $E$  and Poisson's ratio to  $\mu$

is subjected to the hydrostatic pressure  $p$ .

Find:

(a) the fractional decrement of its volume,

(b) the relationship between the compressibility  $\beta$  and the elastic constants  $E$  and  $\mu$ .

Show that Poisson's ratio  $\mu$  cannot exceed  $1/2$ .

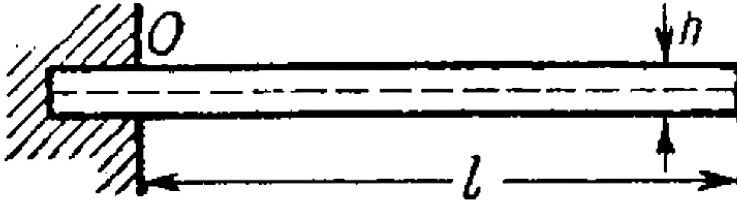
.



[View Text Solution](#)

**11.** One end of a steel rectangular girder is embedded into a wall (figure). Due to gravity it sags slightly. Find the radius of curvature of the neutral layer (see the dotted line in the figure) in the vicinity of the point O if the length of the protruding section of the girder is equal to  $l = 6.0m$  and the thickness of the

girder equals  $h = 10\text{cm}$ .



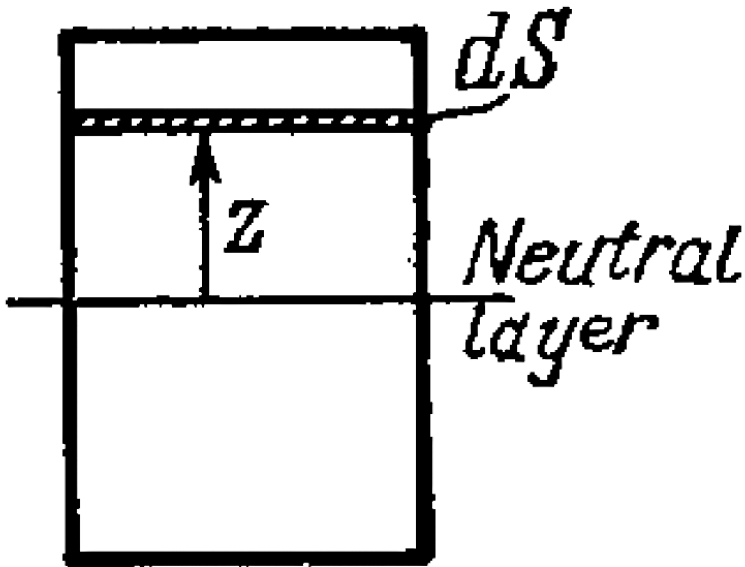
 [View Text Solution](#)



12. The bending of an elastic rod is described by the elastic curve passing through centres of gravity of rod's cross-sections. At small bendings the equation of this curve takes the form

$$N(x) = EI \frac{d^2 y}{dx^2},$$

where  $N(x)$  is the bending moment of the elastic forces in the cross-section corresponding to the  $x$  coordinate,  $E$  is Young's modulus,  $I$  is the moment of inertia of the cross-section relative to the axis passing through the neutral layer ( $I = \int z^2 dS$ , figure)




Suppose one end of a steel rod of a square cross-section with side  $a$  is embedded into a wall, the protruding section being of length  $l$  (figure). Assuming the mass of the rod to be negligible, find the shape of the elastic curve and the deflection of the rod  $\lambda$ , if its end A

experiences

(a) the bending moment of the couple  $N_0$ ,

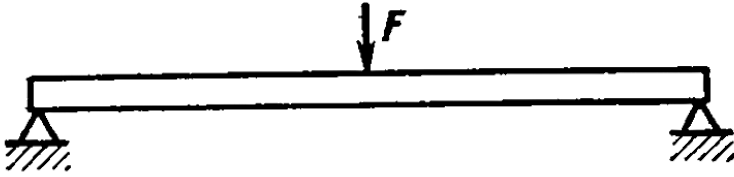
(b) a force  $F$  oriented along the  $y$  axis.



[View Text Solution](#)

**13.** A steel girder of length  $l$  rests freely on two supports (figure). The moment of inertia of its cross-section is equal to  $I$  (see the foregoing problem). Neglecting the mass of the girder and assuming the sagging to be slight, find the deflection  $\lambda$  due to the force  $F$  applied to

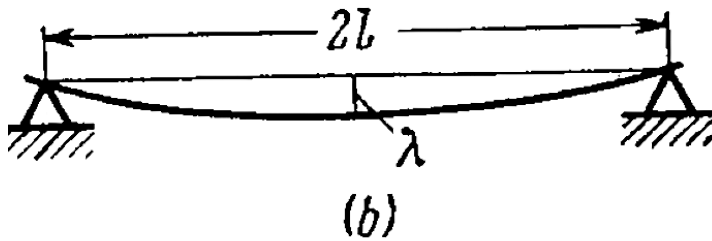
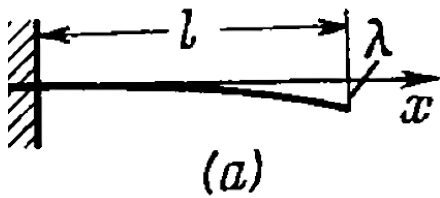
the middle of the girder.



[View Text Solution](#)

**14.** The thickness of a rectangular steel girder equals  $h$ , find the deflection  $\lambda$  caused by the weight of the girder in two cases:

(a) one end of the girder is embedded into a wall with the length of the protruding section being equal to  $l$  (figure)

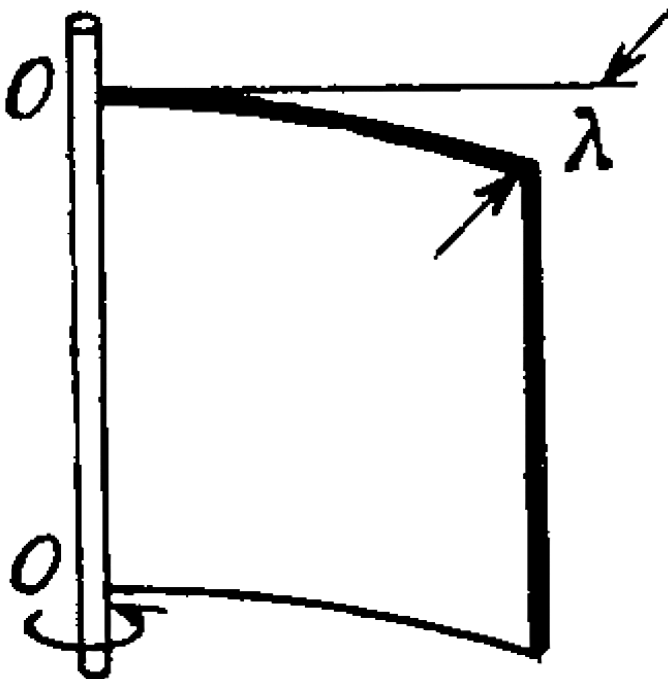


(b) the girder of length  $2l$  rests freely on two supports (figure).



[View Text Solution](#)

15. A steel plate of thickness  $h$  has the shape of a square whose side equals  $l$ , with  $h \ll l$ . The plate is rigidly fixed to a vertical axle  $OO$  which is rotated with a constant angular acceleration  $\beta$  (figure). Find the deflection  $\lambda$ , assuming the sagging to be small.







[View Text Solution](#)

**16.** Determine the relationship between the torque  $N$  and the torsion angle  $\varphi$  for

(a) the tube whose wall thickness  $\Delta r$  is considerably less than the tube radius,

(b) for the solid rod of circular cross-section.

Their length  $l$ , radius  $r$ , and shear modulus  $G$  are supposed to be known.



[View Text Solution](#)

**17.** Calculate the torque  $N$  twisting a steel tube of length  $l = 3.0m$  through an angle  $\varphi = 2.0^\circ$  about its axis, if the inside and outside diameters of the tube are equal to  $d_1 = 30mm$  and  $d_2 = 50mm$ .



**Watch Video Solution**

**18.** Find the maximum power which can be transmitted by means of a steel shaft rotating about its axis with an angular velocity  $\omega = 120rad/s$ , if its length  $l = 200cm$ , radius

$r = 1.50\text{cm}$ , and the permissible torsion angle  $\varphi = 2.5^\circ$ .



[Watch Video Solution](#)

**19.** A uniform ring of mass  $m$ , with the outside radius  $r_2$ , is fitted tightly on a shaft of radius  $r_1$ . The shaft is rotated about its axis with a constant angular acceleration  $\beta$ . Find the moment of elastic forces in the ring as a function of the distance  $r$  from the rotation axis.



[View Text Solution](#)

**20.** Find the elastic deformation energy of a steel rod of mass  $m = 3.1\text{kg}$  stretched to a tensile strain  $\varepsilon = 1.0 \cdot 10^{-3}$ .



[Watch Video Solution](#)

**21.** A steel cylindrical rod of length  $l$  and radius  $r$  is suspended by its end from the ceiling.

(a) Find the elastic deformation energy  $U$  of the rod.

(b) Define  $U$  in terms of tensile strain  $\Delta l / l$  of the rod.



[Watch Video Solution](#)

**22.** What work has to be performed to make a hoop out of a steel band of length  $l = 2.0m$ , width  $h = 6.0cm$ , and thickness  $\delta = 2.0mm$ ? The process is assumed to proceed within the elasticity range of the material.



[View Text Solution](#)

**23.** Find the elastic deformation energy of a steel rod whose one end is fixed and the other is twisted through an angle  $\varphi = 6.0^\circ$ . The length of the rod is equal to  $l = 1.0m$ , and the radius to  $r = 10mm$ .



**Watch Video Solution**

**24.** Find how the volume density of the elastic deformation energy is distributed in a steel rod depending on the distance  $r$  from its axis.

The length of the rod is equal to  $l$ , the torsion angle to  $\varphi$ .



[View Text Solution](#)

25. Find the volume density of the elastic deformation energy in fresh water at the depth of  $h = 1000m$ .

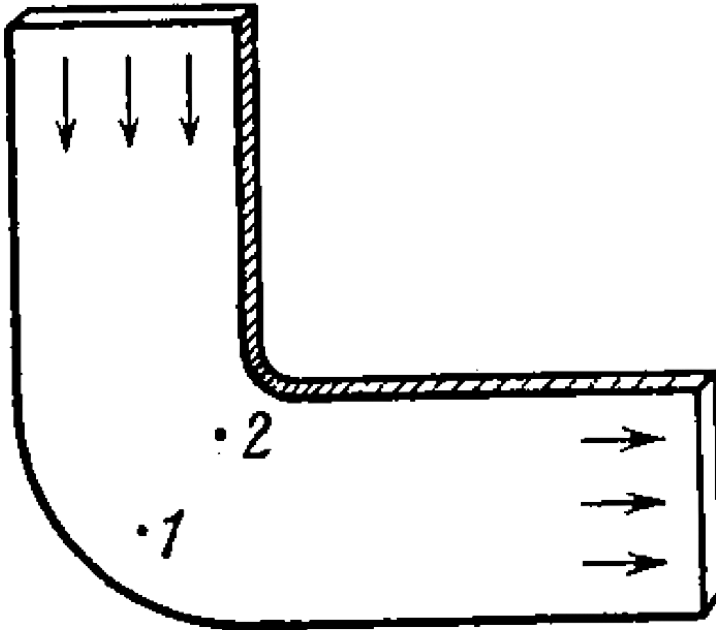


[Watch Video Solution](#)

1. Ideal fluid flows along a flat tube of constant cross-section, located in a horizontal plane and bent as shown in figure. (top view). The flow is steady. Are the pressures and velocities of the fluid equal at points 1 and 2?



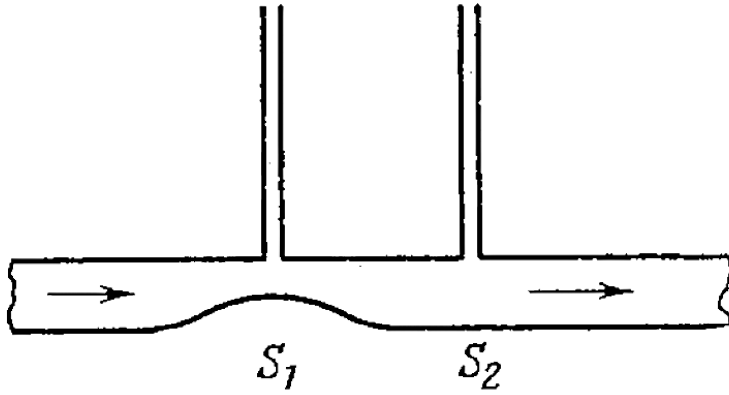
What is the shape of the streamlines?



[View Text Solution](#)

2. Two manometric tubes are mounted on a horizontal pipe of varying cross-section at the section  $S_1$  and  $S_2$  (figure). Find the volume of water flowing across the pipe's section per unit time if the difference in water columns is

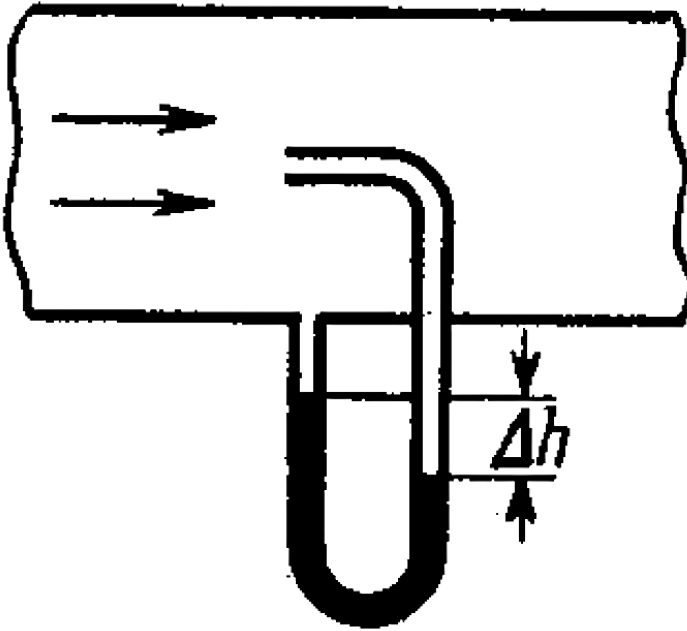
equal to  $\Delta h$ .



**Watch Video Solution**

3. A Pitot tube (figure) is mounted along the axis of a gas pipeline whose cross-sectional area is equal to  $S$ . Assuming the viscosity to be negligible, find the volume of gas flowing across the section of the pipe per unit time, if the difference in the liquid columns is equal to  $\Delta h$ , and the densities of the liquid and the

gas are  $\rho_0$  and  $\rho$  respectively.



[Watch Video Solution](#)

4. A wide vessel with a small hole in the bottom is filled with water and kerosene. Neglecting the viscosity, find the velocity of the water flow, if the thickness of the water layer is equal to  $h_1 = 30\text{cm}$  and that of the kerosene layer to  $h_2 = 20\text{cm}$ .



[Watch Video Solution](#)

5. A wide cylindrical vessel  $50\text{cm}$  in height is filled with water and rests on a table.

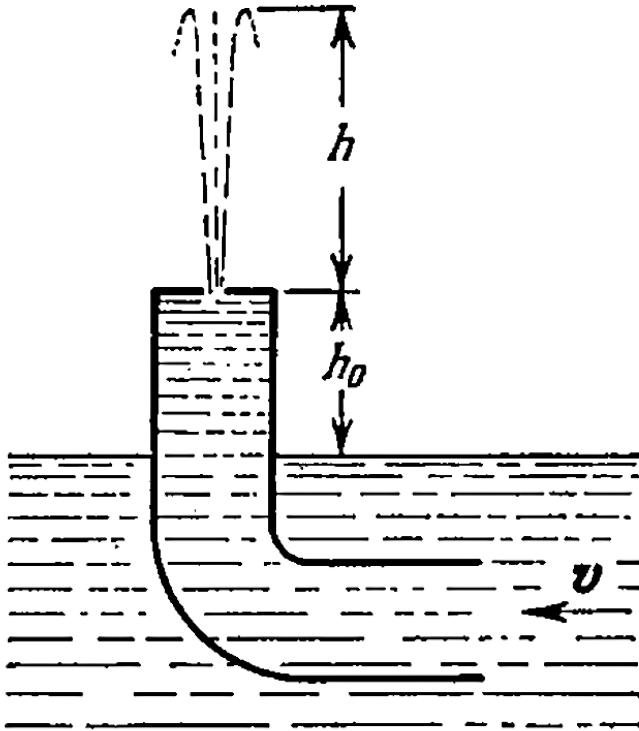
Assuming the viscosity to be negligible, find at what height from the bottom of the vessel a small hole should be perforated for the water jet coming out of it to hit the surface of the table at the maximum distance  $l_{\max}$  from the vessel. Find  $l_{\max}$ .



**Watch Video Solution**

**6.** A bent tube is lowered into a water stream as shown in figure. The velocity of the stream relative to the tube is equal to  $v = 2.5m/s$ .

The closed upper end of the tube located at the height  $h_0 = 12\text{cm}$  has a small orifice. To what height  $h$  will the water jet spurt?

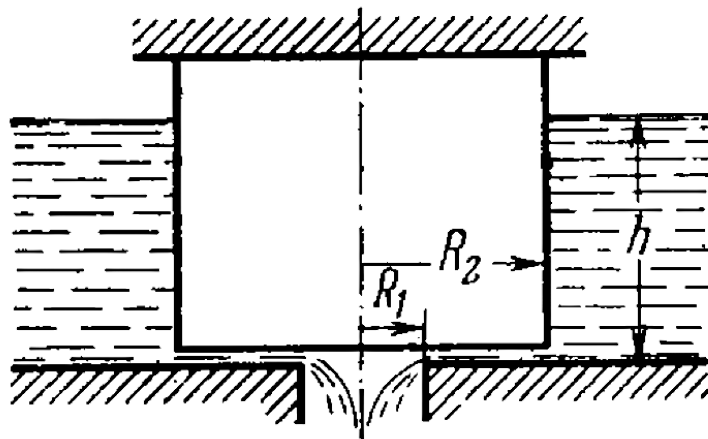


Watch Video Solution



7. The horizontal bottom of wide vessel with an ideal fluid has a round orifice of radius  $R_1$  over which a round closed cylinder is mounted, whose radius  $R_2 > R_1$  (figure). The clearance between the cylinder and the bottom of the vessel is very small, the fluid density is  $\rho$ . Find the static pressure of the fluid in the clearance as a function of the distance  $r$  from the axis of the orifice (and the

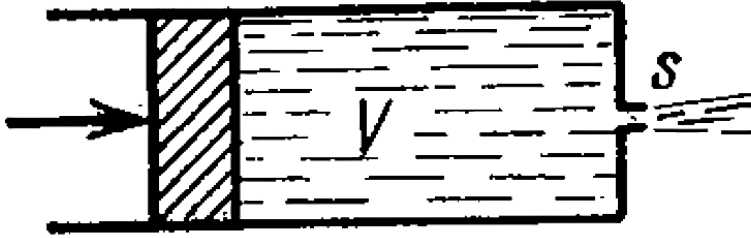
cylinder), if the height of the fluid is equal to  $h$ .



**Watch Video Solution**

**8.** What work should be done in order to squeeze all water from a horizontally located cylinder (figure) during the time  $t$  by means of a constant force acting on the piston? The volume of water in the cylinder is equal to  $V$ , the cross-sectional area of the orifice to  $s$ , with  $s$  being considerably less than the piston area.

The friction and viscosity are negligibly small.



[Watch Video Solution](#)

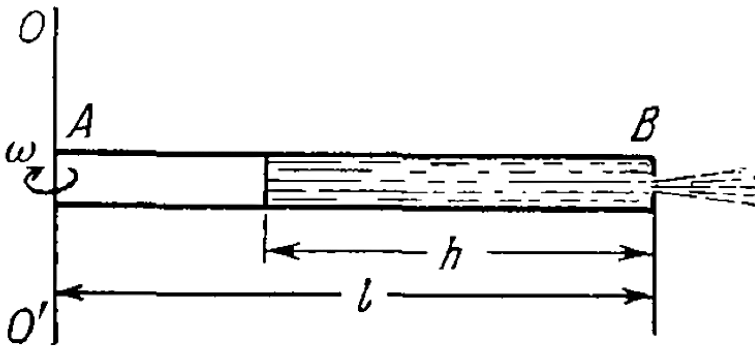
9. A cylindrical vessel of height  $h$  and base area  $S$  is filled with water. An orifice of area  $s \ll S$  is opened in the bottom of the vessel. Neglecting the viscosity of water, determine how soon all the water will pour out of the vessel.



[Watch Video Solution](#)

10. A horizontally oriented tube AB of length  $l$  rotates with a constant angular velocity  $\omega$

about a stationary vertical axis  $OO'$  passing through the end A (figure). The tube is filled with an ideal fluid. The end A of the tube is open, the closed end B has a very small orifice. Find the velocity of the fluid relative to the tube as a function of the column "height"  $h$ .





[Watch Video Solution](#)

**11.** Demonstrate that in the case of a steady flow of an ideal fluid the Bernoulli equation is derived.



[View Text Solution](#)

**12.** On the opposite sides of a wide vertical vessel filled with water two identical holes are opened each having the cross-sectional area  $S = 0.50\text{cm}^2$  the height difference between

them is equal to  $\Delta h = 51\text{cm}$  find the resultant force of reaction of the water flowing out of the vessel.



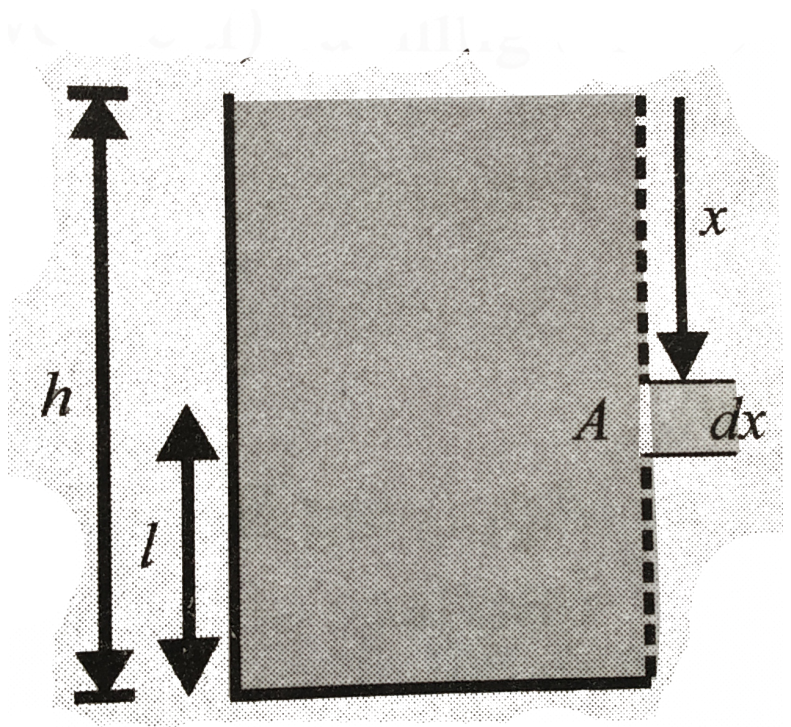
[Watch Video Solution](#)

**13.** The side wall of a wide vertical vessel of height  $h = 75\text{cm}$  has a narrow slit (vertical) running all the way down to the bottom of the vessel.

The length of the slit is  $l = 50\text{cm}$  and the width is  $b = 1\text{mm}$ . With the slit closed, water



is filled to the top. Find the resultant reaction force of water coming out as the slit is



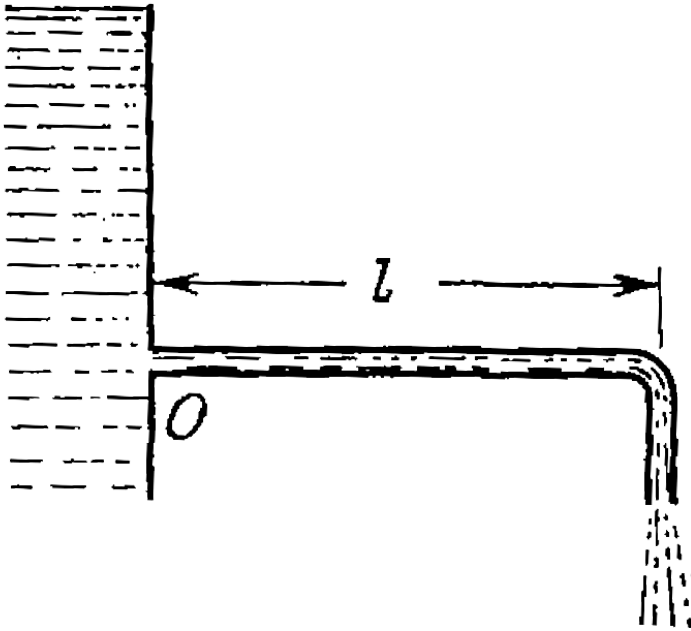
opened.



[Watch Video Solution](#)

**14.** Water flows out of a big tank along a tube bent at right angles, the inside radius of the tube is equal to  $r = 0.50\text{cm}$  (figure). The length of the horizontal section of the tube is equal to  $l = 22\text{cm}$ . The water flow rate is  $Q = 0.50$  litres per second. Find the moment of reaction forces of flowing water, acting on

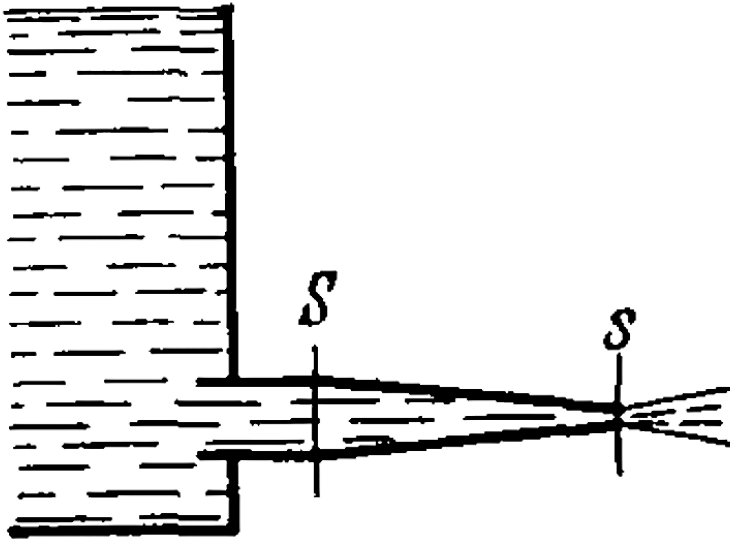
the tube's walls, relative to the point O.



[Watch Video Solution](#)

**15.** A side wall of a wide open tank is provided with a narrowing tube (figure) through which water flows out. The cross-sectional area of the tube decreases from  $S = 3.0\text{cm}^2$  to  $s = 1.0\text{cm}^2$ . The water level in the tank is  $h = 4.6\text{m}$  higher than that in the tube. Neglecting the viscosity of the water, find the horizontal component of the force tending to

pull the tube out of the tank.



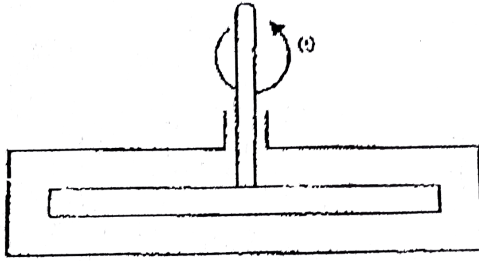
[View Text Solution](#)

**16.** A cylindrical vessel with water is rotated about its vertical axis with a constant angular velocity  $\omega$ . Find:

- (a) the shape of the free surface of the water,
- (b) the water pressure distribution over the bottom of the vessel along its radius provided the pressure at the central point is equal to  $p_0$ .



**View Text Solution**



17.

A thin horizontal disc of radius  $R=10\text{cm}$  is located within a cylindrical cavity filled with oil whose viscosity  $\eta = 0.08\text{P}$  (figure). The distance between the disc and the horizontal planes of the cavity is equal to  $h = 1.0\text{ mm}$ . Find the power developed by the viscous forces acting on the disc when it rotates with the

angular velocity  $\omega = 60 \text{ rad/s}$ . The end effects are to be neglected.



[Watch Video Solution](#)

**18.** A long cylinder of radius  $R_1$  is displaced along its axis with a constant velocity  $v_0$  inside a stationary co-axial cylinder of radius  $R_2$ . The space between the cylinders is filled with viscous liquid. Find the velocity of the liquid as a function of the distance  $r$  from the axis of the cylinders. The flow is laminar.





19. A fluid with viscosity  $\eta$  fills the space between two long co-axial cylinders of radii  $R_1$  and  $R_2$ , with  $R_1 < R_2$ . The inner cylinder is stationary while the outer one is rotated with a constant angular velocity  $\omega_2$ . The fluid flow is laminar. Taking into account that the friction force acting on a unit area of a cylindrical surface of radius  $r$  is defined by the formula  $\sigma = \eta r (\partial \omega / \partial r)$ , find:

(a) the angular velocity of the rotating fluid is

as a function of radius  $r$ ,

(b) the moment of the friction forces acting on a unit length of the outer cylinder.



[Watch Video Solution](#)

**20.** A tube of length  $l$  and radius  $R$  carries a steady flow of fluid whose density is  $\rho$  and viscosity  $\eta$ . The fluid flow velocity depends on the distance  $r$  from the axis of the tube as  $v = v_0(1 - r^2 / R^2)$ . Find:

(a) the volume of the fluid flowing across the

section of the tube per unit time:

(b) the kinetic energy of the fluid within the tube's volume,

(c) the friction force exerted on the tube by the fluid,

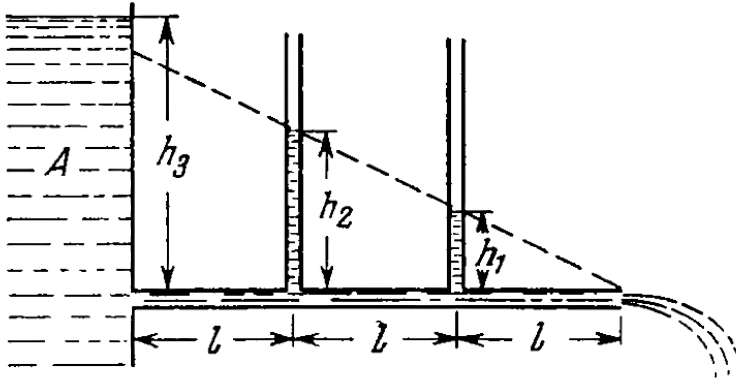
(d) the pressure difference at the ends of the tube.



[View Text Solution](#)

**21.** In the arrangement shown in figure a viscous liquid whose density is  $\rho = 1.0g/cm^3$

flows along a tube out of a wide tank



A. Find the velocity of the liquid flow, if  $h_1 = 10\text{cm}$ ,  $h_2 = 20\text{cm}$ , and  $h_3 = 35\text{cm}$ . All the distances  $l$  are equal.



**Watch Video Solution**

22. The cross-sectional radius of a pipeline decreases gradually as  $r = r_0 e^{-\alpha x}$ , where  $\alpha = 0.50 \text{ms}^{-1}$ ,  $x$  is the distance from the pipeline inlet. Find the ratio of Reynolds numbers of two cross-sections separated by  $\Delta x = 3.2 \text{m}$ .



**Watch Video Solution**

23. When a sphere of radius  $r_1 = 1.2 \text{mm}$  moves in glycerin, the laminar flow is observed

if the velocity of the sphere does not exceed  $v_1 = 23\text{cm} / \text{s}$ . At what minimum velocity  $v_2$  of a sphere of radius  $r_2 = 5.5\text{cm}$  will the flow in water become turbulent? The viscosities of glycerin and water are equal to  $\eta_1 = 13.9P$  and  $\eta_2 = 0.011P$  respectively.



**Watch Video Solution**

**24.** A lead sphere is steadily is steadily sinking in glycerine whose viscosity is equal to  $\eta = 13.9 P$ . What is the maximum diameter of

the sphere at which the flow around that sphere still remains laminar? It is known that the transition to the turbulent flow correspond to reynolds number  $R_e = 0.5$ . (here the charactrstic length is taken to be the sphere diameter). (in mm)



[Watch Video Solution](#)

**25.** A steel ball of diameter  $d = 3.0mm$  starts sinking with zero initial velocity in olive oil whose viscosity is  $\eta = 0.90P$ . How soon after

the beginning of motion will the velocity of the ball differ from the steady-state velocity by  $n = 1.0\%$  ?



[Watch Video Solution](#)

## Relativistic Mechanics

1. A rod moves lengthwise with a constant velocity  $v$  relative to the inertial reference frame  $K$ . At what value of  $v$  will the length of



the rod in this frame be  $\eta = 0.5\%$  less than its proper length?



[Watch Video Solution](#)

2. In a triangle the proper length of each side equals  $a$ . Find the perimeter of this triangle in the reference frame moving relative to it with a constant velocity  $V$  along one of its

(a) bisectors, (b) sides.

Investigate the results obtained at  $V \ll c$  and  $V \rightarrow c$ , where  $c$  is the velocity of light.



[View Text Solution](#)

3. Find the proper length of a rod if in the laboratory frame of reference its velocity is  $v = c/2$ , the length  $l = 1.00m$ , and the angle between the rod and its direction of motion is  $\theta = 45^\circ$ .



[View Text Solution](#)

4. A stationary upright cone has a taper angle  $\theta = 45^\circ$ , and the area of the lateral surface

$S_0 = 4.0m^2$ . Find: (a) its taper angle, (b) its lateral surface area, in the reference frame moving with a velocity  $v = (4/5)c$  along the axis of the cone.



[View Text Solution](#)

5. With what velocity (relative to the reference frame K) did the clock move, if during the time interval  $t = 5.0s$ , measured by the clock of the frame K, it becomes slow by  $\Delta t = 0.10s$ ?



[Watch Video Solution](#)

6. A rod flies with constant velocity past a mark which is stationary in the reference frame K. In the frame K it takes  $\Delta t = 20ns$  for the rod to fly past the mark. In the reference frame fixed to the rod the mark moves past the rod of  $\Delta t' = 25ns$ . Find the proper length of rod.



[Watch Video Solution](#)

7. The proper lifetime of an unstable particle is equal to  $\Delta t_0 = 10ns$ . Find the distance this

particle will traverse till its decay in the laboratory frame of reference, where its lifetime is equal to  $\Delta t = 20ns$ .



[Watch Video Solution](#)

8. In the reference frame K a muon moving with a velocity  $v = 0.990c$  travelled a distance  $l = 3.0km$  from its birthplace to the point where it decayed. Find:

(a) the proper lifetime of this muon,

(b) the distance travelled by the muon in the frame K "from the muon's standpoint".



[Watch Video Solution](#)

9. Two particles moving in a laboratory frame of reference along the same straight line with the same velocity  $v = (3/4)c$  strike against a stationary target with the time interval  $\Delta t = 50ns$ . Find the proper distance between the particles prior to their hitting the target.



[View Text Solution](#)

**10.** A rod moves along a ruler with a constant velocity. When the positions of both ends of the rod are marked simultaneously in the reference frame fixed to the ruler, the difference of readings on the ruler is equal to  $\Delta x_1 = 4.0m$ . But when the positions of the rod's ends are marked simultaneously in the reference frame fixed to the rod, the difference of readings on the same ruler is equal to  $\Delta x_2 = 9.0m$ . Find the proper length of the rod and its velocity relative to the ruler.



[Watch Video Solution](#)

**11.** Two rods of the same proper length  $l_0$  move toward each other parallel to a common horizontal axis. In the reference frame fixed to one of the rods the time interval between the moments, when the right and left ends of the rods coincide, is equal to  $\Delta t$ . What is the velocity of one rod relative to the other?



[Watch Video Solution](#)



12. Two unstable particles move in the reference frame K along a straight line in the same direction with a velocity  $v = 0.990c$ . The distance between them in this reference frame is equal to  $l = 120m$ . At a certain moment both particles decay simultaneously in the reference frame fixed to them. What time interval between the moments of decay of the two particles will be observed in the frame K? Which particle decays later in the frame K?



[View Text Solution](#)

**13.** A rod AB oriented along the x axis of the reference frame K moves in the positive direction of the x axis with a constant velocity  $v$ . The point A is the forward end of the rod, and the point B its near end. Find:

(a) the proper length of the rod, if at the moment  $t_A$  the coordinate of the point A is equal to  $x_A$ , and at the moment  $t_B$  the coordinate of the point B is equal to  $x_B$ ,

(b) what time interval should separate the markings of coordinates of the rod's ends in the frame K for the difference of coordinates

to become equal to the proper length of the rod.



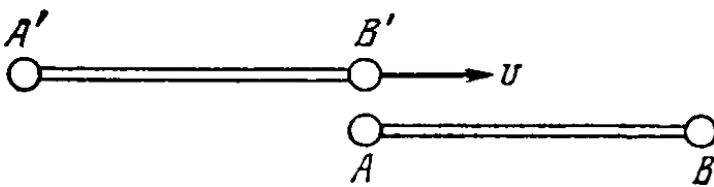
[View Text Solution](#)

**14.** The rod  $A'B'$  moves with a constant velocity  $v$  relative to the rod  $AB$  (figure). Both rods have the same proper length  $l_0$  and at the ends of each of them clocks are mounted, which are synchronized pairwise:  $A$  with  $B$  and  $A'$  with  $B'$ . Suppose the moment when the clock  $B'$  gets opposite the clock  $A$  is taken for

the beginning of the time count in the reference frames fixed to each of the rods.

Determine:

- (a) the readings of the clocks  $B$  and  $B'$  at the moment when they are opposite each other,
- (b) the same for the clocks  $A$  and  $A'$ .

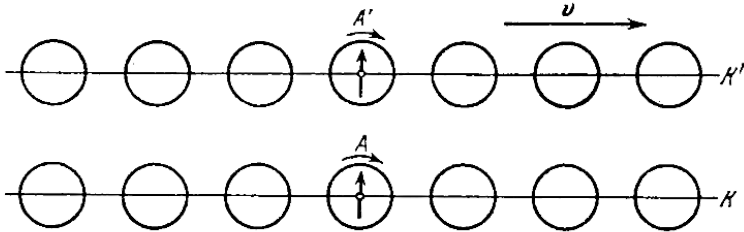




[View Text Solution](#)

15. There are two groups of mutually synchronized clocks  $K$  and  $K'$  moving relative to each other with a velocity  $v$  as shown in Figure. The moment when the clock  $A'$  gets opposite the clock  $A$  is taken for the beginning of the time count. Draw the approximate position of hands of all the clocks at this moment "in terms of the  $K$  clocks", "in terms of

the  $K'$  clocks".



[View Text Solution](#)

**16.** The reference frame  $K'$  moves in the positive direction of the  $x$  axis of the frame  $K$  with a relative velocity  $V'$ . Suppose that at the moment when the origins of coordinates  $O$  and  $O'$  coincide, the clock readings at these points are equal to zero in both frames. Find the displacement velocity  $\dot{x}$  of the point (in the frame  $K$ ) at which the readings of the clocks of both reference frames will be permanently identical. Demonstrate that  $\dot{x} < V$ .



**View Text Solution**

17. At two points of the reference frame  $K$  two events occurred separated by a time interval  $\Delta t$ . Demonstrate that if these events obey the cause-and-effect relationship in the frame  $K$  (e.g. a shot fired and a bullet hitting a target), they obey that relationship in any other inertial reference frame  $K'$ .



[View Text Solution](#)

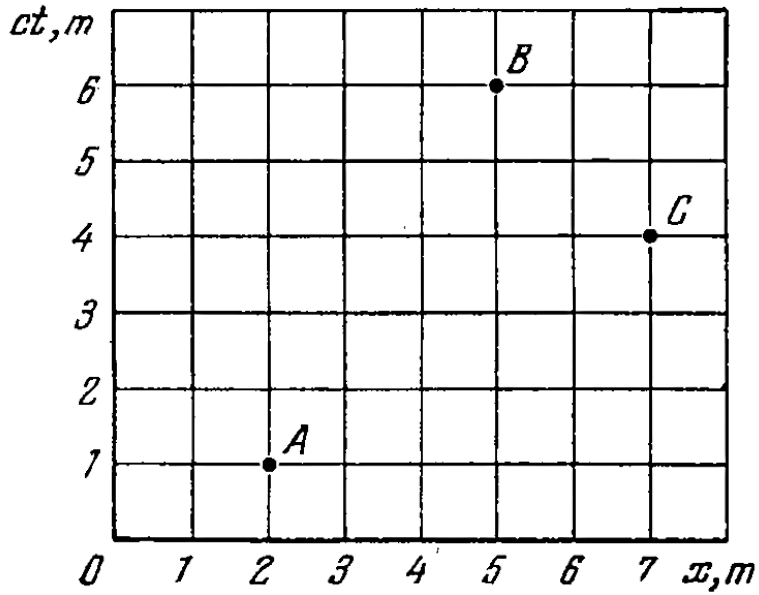


**18.** The space-time diagram, shows three events A, B, and C which occurred on the x axis of some inertial reference frame. Find:

(a) the time interval between the events A and B in the reference frame where the two events occurred at the same point,

(b) the distance between the points at which the events A and C occurred in the reference frame where these two events are

simultaneous.



[View Text Solution](#)

**19.** The velocity components of a particle moving in the  $xy$  plane of the reference frame  $K$  are equal to  $v_x$  and  $v_y$ . Find the velocity  $v'$  of this particle in the frame  $K$  in the positive direction of its  $x$  axis.



**View Text Solution**

**20.** Two particles move toward each other with velocities  $v_1 = 0.50c$  and  $v_2 = 0.75c$  relative to a laboratory frame of reference. Find:

(a) the approach velocity of the particles in the laboratory frame of reference,

(b) their relative velocity.



[View Text Solution](#)

**21.** Two rods having the same proper length  $l_0$  move lengthwise toward each other parallel to a common axis with the same velocity  $v$  relative to the laboratory frame of reference. What is the length of each rod in the reference frame fixed to the other rod?



[View Text Solution](#)

**22.** Two relativistic particles move at right angles to each other in a laboratory frame of reference, one with the velocity  $v_1$  and the other with the velocity  $v_2$ . Find their relative velocity.



[View Text Solution](#)

**23.** An unstable particle moves in the reference frame  $K'$  along its  $y'$  axis with a velocity  $v'$ .

In its turn, the frame  $K'$  moves relative to the frame  $K$  in the positive direction of its  $x$  axis with a velocity  $V$ . The  $x'$  and  $x$  axes of the two reference frames coincide, the  $y'$  and  $y$  axes are parallel. Find the distance which the particle traverses in the frame  $K$ , if its proper lifetime is equal to  $\Delta t_0$ .



[View Text Solution](#)

**24.** A particle moves in the frame  $K$  with a velocity  $v$  at an angle  $\theta$  to the  $x$  axis. Find the

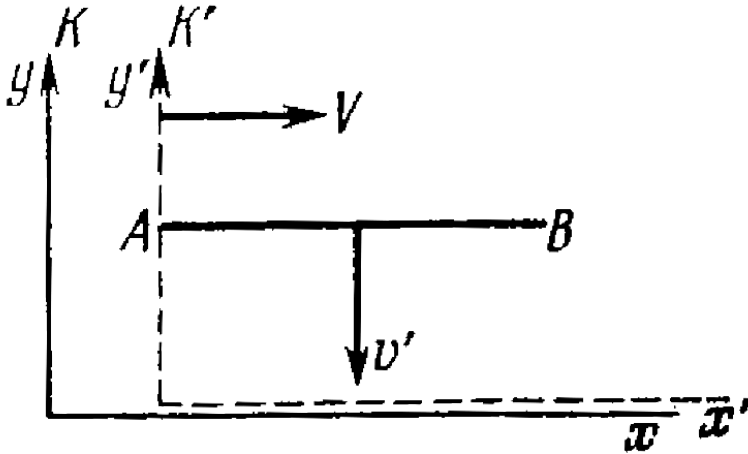
corresponding angle in the frame  $K'$  moving with a velocity  $V$  relative to the frame  $K$  in the positive direction of its  $x$  axis, if the  $x$  and  $x'$  axes of the two frames coincide.



[View Text Solution](#)

**25.** The rod  $AB$  oriented parallel to the  $x'$  axis of the reference frame  $K'$  moves in this frame with a velocity  $v'$  along its  $y'$  axis. In its turn, the frame  $K'$  moves with a velocity  $V$  relative to the frame  $K$  as shown in figure. Find the

angle  $\theta$  between the rod and the x axis in the frame K.



[View Text Solution](#)



**26.** The frame  $K'$  moves with a constant velocity  $V$  relative to the frame  $K$ . Find the acceleration  $w'$  of a particle in the frame  $K'$ , if in the frame  $K$  this particle moves with a velocity  $v$  and acceleration  $w$  along a straight line

(a) in the direction of the vector  $V$ ,

(b) perpendicular to the vector  $V$ .



[View Text Solution](#)

27. An imaginary space rocket launched from the Earth moves with an acceleration  $w' = 10g$  which is the same in every instantaneous co-moving inertial reference frame. The boost stage lasted  $\tau = 1.0$  year of terrestrial time. Find how much (in per cent) does the rocket velocity differ from the velocity of light at the end of the boost stage. What distance does the rocket cover by that moment?



**View Text Solution**

**28.** From the conditions of the foregoing problem determine the boost time  $\tau_0$  in the reference frame fixed to the rocket. Remember

$$\tau_0 = \int_0^{\tau} \sqrt{1 - (v/c)^2} dt,$$

where  $dt$  is the time in the geocentric reference frame.



**View Text Solution**

**29.** How many times does the relativistic mass of a particle whose velocity differs from the

velocity of light by  $0.010\%$  exceed its rest mass?



[Watch Video Solution](#)

**30.** The density of a stationary body is equal to  $\rho_0$ . Find the velocity (relative to the body) of the reference frame in which the density of the body is  $\eta = 25\%$  greater than  $\rho_0$ .



[View Text Solution](#)

**31.** A proton moves with a momentum  $p = 10.0\text{GeV}/c$ , where  $c$  is the velocity of light. How much (in per cent) does the proton velocity differ from the velocity of light?



[View Text Solution](#)

**32.** Find the velocity at which the relativistic momentum of a particle exceeds its Newtonian momentum  $\eta = 2$  times.



[Watch Video Solution](#)

**33.** What work has to be performed in order to increase the velocity of a particle of rest mass  $m_0$  from  $0.60c$  to  $0.80c$ ? Compare the result obtained with the value calculated from the classical formula.



**Watch Video Solution**

**34.** Find the velocity at which the kinetic energy of a particle equals its rest energy.



**Watch Video Solution**

**35.** At what values of the ratio of the kinetic energy to rest energy can the velocity of a particle be calculated from the classical formula with the relative error less than  $\varepsilon = 0.010$ ?



[View Text Solution](#)

**36.** Find how the momentum of a particle of rest mass  $m_0$  depends on its kinetic energy.

Calculate the momentum of a proton whose kinetic energy equals  $500\text{MeV}$ .



[Watch Video Solution](#)

**37.** A beam of relativistic particles with kinetic energy  $T$  strikes against an absorbing target. The beam current equals  $I$ , the charge and rest mass of each particle are equal to  $e$  and  $m_0$  respectively. Find the pressure developed by the beam on the target surface, and the power liberated there.





**38.** A sphere moves with a relativistic velocity  $v$  through a gas whose unit volume contains  $n$  slowly moving particles, each of mass  $m$ . Find the pressure  $p$  exerted by the gas on a spherical surface element perpendicular to the velocity of the sphere, provided that the particles scatter elastically. Show that the pressure is the same both in the reference frame fixed to the sphere and in the reference frame fixed to the gas.



[View Text Solution](#)

**39.** A particle of rest mass  $m_0$  starts moving at a moment  $t = 0$  due to a constant force  $F$ . Find the time dependence of the particle's velocity and of the distance covered.



[View Text Solution](#)

**40.** A particle of rest mass  $m_0$  moves along the  $x$  axis of the frame  $K$  in accordance with the law  $x = \sqrt{a^2 + c^2 t^2}$ , where  $a$  is a constant,  $c$

is the velocity of light, and  $t$  is time. Find the force acting on the particle in this reference frame.



[Watch Video Solution](#)

**41.** Proceeding from the fundamental equation of relativistic dynamics, find:

(a) under what circumstances the acceleration of a particle coincides in direction with the force  $F$  acting on it,

(b) the proportionality factors relating the

force  $F$  and the acceleration  $w$  in the cases when  $F \perp v$  and  $F \parallel v$ , where  $v$  is the velocity of the particle.



[View Text Solution](#)

**42.** A relativistic particle with momentum  $p$  and total energy  $E$  moves along the  $x$  axis of the frame  $K$ . Demonstrate that in the frame  $K'$  moving with a constant velocity  $V$  relative to the frame  $K$  in the positive direction of its axis  $x$  the momentum and the total energy of

the given particle are defined by the formula:

$$p'_x = \frac{p_x - EV/c^2}{\sqrt{1 - \beta^2}}, E' = \frac{E - p_x V}{\sqrt{1 - \beta^2}}$$

where  $\beta = V/c$



[View Text Solution](#)

**43.** The photon energy in the frame  $K$  is equal to  $\varepsilon$ . Making use of the transformation formulas cited in the foregoing problem, find the energy  $\varepsilon'$  of this photon in the frame  $K'$  moving with a velocity  $V$  relative to the frame  $K$  in the photon's motion direction. At what

value of  $V$  is the energy of the photon equal to

$$\varepsilon' = \varepsilon / 2?$$



[View Text Solution](#)

**44.** Demonstrate that the quantity  $E^2 - p^2 c^2$  for a particle is an invariant, i.e. it has the same magnitude in all inertial reference frames. What is the magnitude of this invariant?



[View Text Solution](#)

**45.** A neutron with kinetic energy  $T = 2m_0c^2$ , where  $m_0$  is its rest mass, strikes another, stationary, neutron. Determine:

(a) the combined kinetic energy  $\tilde{T}$  of both neutrons in the frame of their centre of inertia and the momentum  $\tilde{p}$  of each neutron in that frame,

(b) the velocity of the centre of inertia of this system of particles.

Instruction. Make use of the invariant  $E^2 - p^2c^2$  remaining constant on transition from one inertial reference frame to another

( $E$  is the total energy of the system,  $p$  is its composite momentum).



[View Text Solution](#)

**46.** A particles of rest mass  $m_0$  with kinetic energy  $T$  strikes a stationary particle of the same rest mass. Find the rest mass and the velocity of the compound particle formed as a result of the collision.



[View Text Solution](#)



**47.** How high must be the kinetic energy of a proton striking another, stationary, proton for their combined kinetic energy in the frame of the centre of inertia to be equal to the total kinetic energy of two protons moving toward each other with individual kinetic energies  $T = 25.0\text{GeV}$ ?



**View Text Solution**

**48.** A stationary particle of rest mass  $m_0$  disintegrates into three particles with rest

masses  $m_1$ ,  $m_2$ , and  $m_3$ . Find the maximum total energy that, for example, the particle  $m_1$  may possess.



[Watch Video Solution](#)

**49.** A relativistic rocket emits a gas jet with non-relativistic velocity  $u$  constant relative to the rocket. Find how the velocity  $v$  of the rocket depends on its rest mass  $m$  if the initial rest mass of the rocket equals to  $m_0$ .



[Watch Video Solution](#)

