



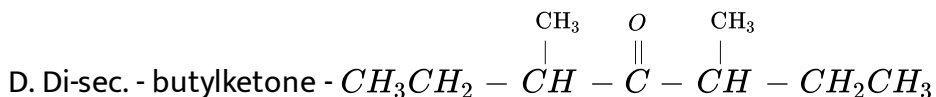
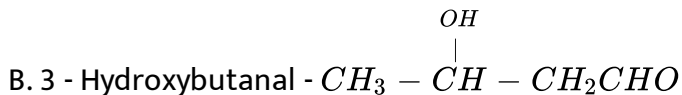
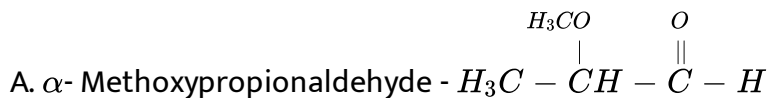
CHEMISTRY

BOOKS - NCERT FINGERTIPS CHEMISTRY (HINGLISH)

ALDEHYDES, KETONES AND CARBOXYLIC ACIDS

Nomenclature And Structure Of Carbonyl Group

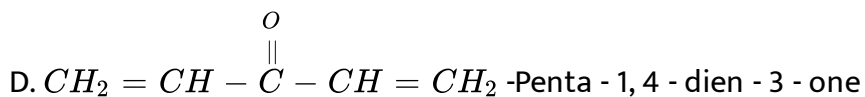
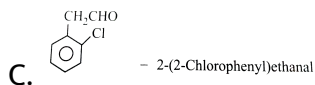
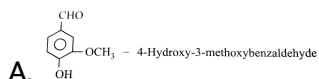
1. Which of the following structures is not correctly matched ?



Answer: C

 [Watch Video Solution](#)

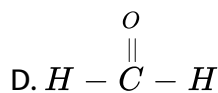
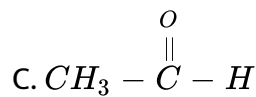
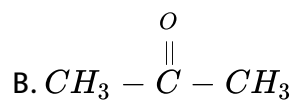
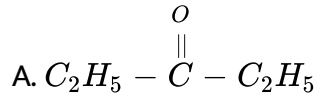
2. Which of the following names of the organic compounds is not correctly written ?



Answer: B

 [View Text Solution](#)

3. Which of the following carbonyl compounds is most polar ?



Answer: D

 [Watch Video Solution](#)

Preparation Of Aldehydes And Ketones

1. Ketones $\left(R - \overset{O}{\parallel} C - R' \right)$ can be obtained in one step by (where R and R' are alkyl groups)

A. hydrolysis of esters

B. oxidation of primary alcohols

C. oxidation of secondary alcohols

D. reaction of alkyl halides with alcohols.

Answer: C

 [Watch Video Solution](#)

2. Ozonolysis of an organic compound gives formaldehyde as one of products. This confirms the presence of

A. two ethylenic double bonds

B. terminal double bond

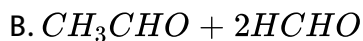
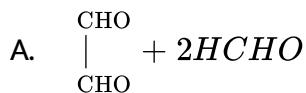
C. an isopropyl group

D. an acetylenic triple bond.

Answer: B

 [View Text Solution](#)

3. A diene, buta - 1, 3 - diene was subjected to ozonolysis to prepare aldehydes. Which of the following aldehydes will be obtained during the reaction ?



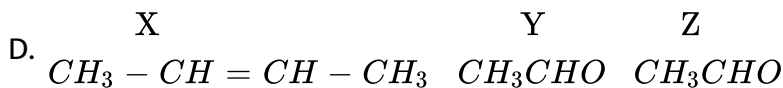
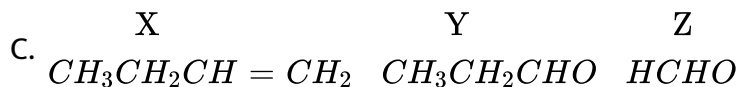
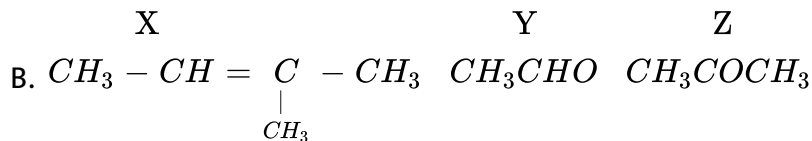
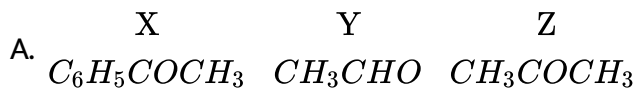
Answer: A



Watch Video Solution

4. An alkene 'A' (molecular formula C_5H_{10}) on ozonolysis gives a mixture of two compounds 'B' and 'C'. Compound 'B' gives positive Fehling's test and also forms iodoform on treatment with I_2 and NaOH . Compound 'C' does not give Fehling's test but forms iodoform. Identify

the compounds A, B and C. Write the reaction for ozonolysis and formation of iodoform from B and C.



Answer: B

 [Watch Video Solution](#)

5. Propanone can be prepared from ethyne by

A. passing a mixture of ethyne and steam over a catalyst, magnesium

at 420°C

B. passing a mixture of ethyne and ethanol over a catalyst zinc

chromite

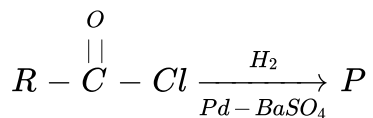
C. boiling ethyne with water and H_2SO_4

D. treating ethyne with Iodine and NaOH.

Answer: A

 [View Text Solution](#)

6. In the following reaction, product P is



A. RCHO

B. RCH_3

C. RCOOH

D. RCH_2OH

Answer: A

 [Watch Video Solution](#)

7. The reduction of benzoyl chloride with $H_2 / Pd - BaSO_4$ produces

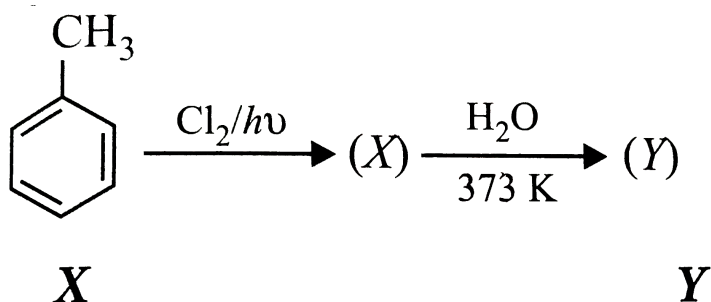
- A. benzoic acid
- B. benzyl alcohol
- C. benzoyl sulphate
- D. benzaldehyde.

Answer: D

 [Watch Video Solution](#)

8. Study the following sequence of reaction and identify the compounds

(X) and (Y).



- A. X Y
Benzaldehyde Benzoic acid
- B. X Y
2-Chlorotoluene 2-Chlorobenzoic acid
- C. X Y
2,4-Dichlorobenzene Benzoic acid
- D. X Y
Benzal chloride Benzaldehyde

Answer: D

 [Watch Video Solution](#)

9. The oxidation of toluene to benzaldehyde by chromyl chloride is called

- A. Etard reaction
- B. Riemer-Tiemann reaction
- C. Wurtz reaction
- D. Cannizzaro's reaction

Answer: A

 [Watch Video Solution](#)

10. Benzaldehyde can be prepared from benzene by passing vapours of and in its solution in presence of catalyst mixture of aluminium chloride and cuprous chloride. The reaction is known as

- A. HCl , $SnCl_4$, Rosenmund reduction
- B. CO , HCl , Gattermann-Koch reaction
- C. CO_2 , H_2SO_4 , Clemmensen reduction
- D. O_3 , alcohol, Wolff-Kishner reduction

Answer: B



[Watch Video Solution](#)

11. Benzophenone can be obtained by

I. Benzoyl chloride + Benzene + $AlCl_3$

II. Benzoyl chloride + Diphenyl cadmium Itr. III. Benzoyl chloride + Phenyl

magnesium chloride Itbr. IV. Benzene+ Carbon monoxide+ $ZnCl_2$

Select an appropriate option

- A. (i) and (ii)
- B. (ii) and (iii)
- C. (i) and (iii)
- D. (i), (ii) and (iii)

Answer: C



[Watch Video Solution](#)

Physical Properties

1. There is a large difference in the boiling points of butanal and butan - 1 - ol due to

- A. intermolecular hydrogen bonding in butan -1-ol
- B. intramolecular hydrogen bonding in butanal

C. higher molecular mass of butan-1-ol

D. resonance shown by butanal .

Answer: A

 [View Text Solution](#)

2. Choose the correct statement regarding the physical properties of carbonyl compound.

A. All aldehydes are insoluble in benzene.

B. Higher aldehydes are more fragrant.

C. n - Butane has more boiling point than acetone.

D. Methanal and propanone are immiscible with water in all proportions.

Answer: B

 [View Text Solution](#)

3. Arrange the following compounds in increasing order of their reactivity in nucleophilic addition reactions.

Ethanal, Propanal, Propanone, Butanone

A. Butanone It Propanone It Propanal It Ethanal

B. Propanone It Butanone It Ethanal gt Propanal

C. Propanal It Ethanal It Propanone It Butanone

D. Ethanal It Propanal It Propanone It Butanone

Answer: A



[View Text Solution](#)

4. Which among the following is most reactive to give nucleophilic addition?

A. FCH_2CHO

B. ClCH_2CHO

C. BrCH_2CHO

D. ICH_2CHO

Answer: A

 [Watch Video Solution](#)

Chemical Reactions

1. The addition of HCN to carbonyl compounds is an example of

- A. nucleophilic addition
- B. electrophilic addition
- C. free radical addition
- D. elimination addition.

Answer: A



Watch Video Solution

2. Which of the following compounds does not react with $NaHSO_3$?

A. $HCHO$

B. $C_6H_5COCH_3$

C. CH_3COCH_3

D. CH_3CHO

Answer: B



View Text Solution

3. Aldehydes other than formaldehyde react with Grignard reagent to give addition products which on hydrolysis give

A. tertiary alcohols

B. secondary alcohols

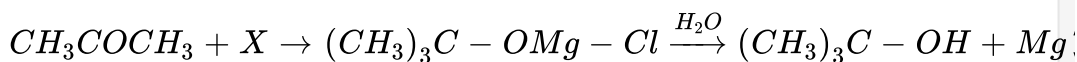
C. primary alcohols

D. carboxylic acids.

Answer: B

 [Watch Video Solution](#)

4. Identify reactant (X) in the given reaction sequence.



A. CH_3MgCl

B. $CH_3COCl + Mg$

C. $MgCl_2$

D. CH_3CH_2MgCl

Answer: A

 [Watch Video Solution](#)

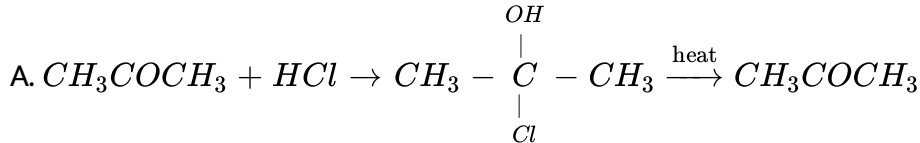
5. An organic compound (X) with molecular formula C_3H_6O is not readily oxidised. On reduction it gives C_3H_8O (Y) which reacts with HBr to give alkyl bromide (Z) which is converted to Grignard reagent. Grignard reagent reacts with (X) to give 2, 3-dimethylbutan-2-ol. (X), (Y) and (Z) respectively are.

- A. CH_3COCH_3 , $CH_3CH_2CH_2OH$, $CH_3CH(Br)CH_3$
- B. CH_3CH_2CHO , $CH_3CH=CH_2$, $CH_3CH(Br)CH_3$
- C. CH_3COCH_3 , $CH_3CH(OH)CH_3$, $CH_3CH(Br)CH_3$
- D. CH_3CH_2CHO , $CH_3CH_2CH_2OH$, $CH_3CH_2CH_2Br$

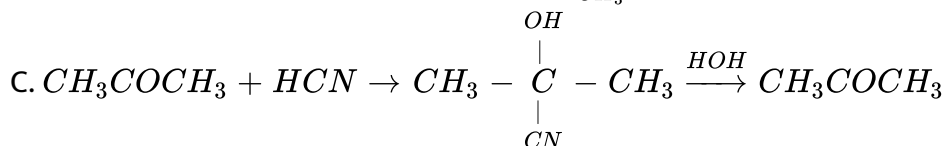
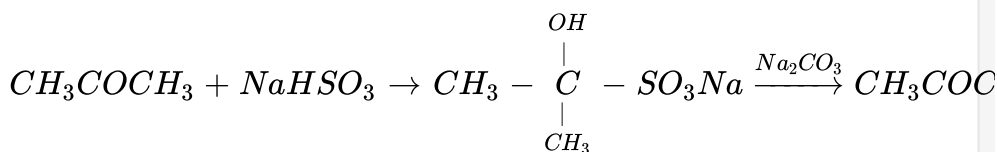
Answer: C

 [Watch Video Solution](#)

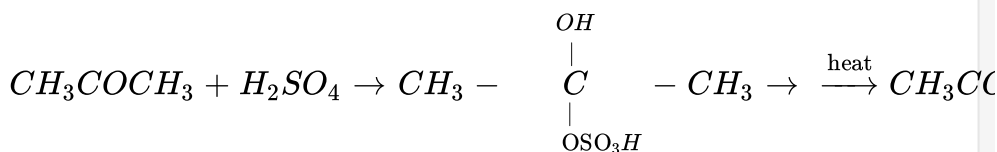
6. The best method to purify impure acetone is



B.



D.



Answer: B

 [View Text Solution](#)

7. Match the reagents in column I with products formed by reactions with acetone in column II and mark the appropriate choice.

Column I		Column II	
(A)	Hydrazine	(i)	$(\text{CH}_3)_2\text{C} = \text{NNHCONH}_2$
(B)	Semicarbazide	(ii)	$(\text{CH}_3)_2\text{C} = \text{NOH}$
(C)	Phenylhydrazine	(iii)	$(\text{CH}_3)_2\text{C} = \text{NNH}_2$
(D)	Hydroxylamine	(iv)	$(\text{CH}_3)_2\text{C} = \text{NNHC}_6\text{H}_5$

A. (A) \rightarrow (i), (B) \rightarrow (ii), (C) \rightarrow (iii), (D) \rightarrow (iv)

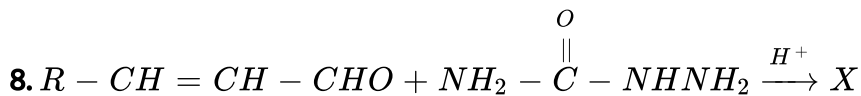
B. (A) \rightarrow (iv), (B) \rightarrow (iii), (C) \rightarrow (ii), (D) \rightarrow (i)

C. (A) \rightarrow (iii), (B) \rightarrow (i), (C) \rightarrow (iv), (D) \rightarrow (ii)

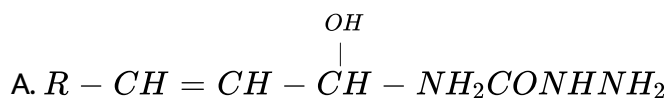
D. (A) \rightarrow (ii), (B) \rightarrow (iv), (C) \rightarrow (i), (D) \rightarrow (iii)

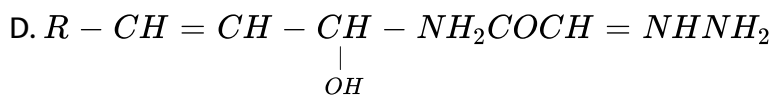
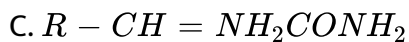
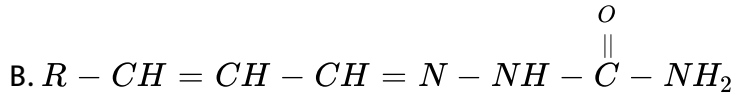
Answer: C

 **Watch Video Solution**



(X) in the above reaction is





Answer: B

 [View Text Solution](#)

9. Hydrocarbons are formed when aldehydes and ketones are reacted with amalgamated zinc and conc. HCl. The reaction is called

- A. Cannizzaro reaction
- B. Clemmensen reduction
- C. Rosenmund reduction
- D. Wolff-Kishner reduction.

Answer: B

 [Watch Video Solution](#)

10. Which of the following statements is incorrect ?

- A. $FeCl_3$ is used in the detection of phenols.
- B. Fehling solution is used in the detection of glucose.
- C. Tollens' reagent is used in the detection of unsaturation.
- D. $NaHSO_3$ is used in the detection of carbonyl compounds.

Answer: C



[View Text Solution](#)

11. What is the test to differentiate between pentan - 2- one and pentan - 3 -one ?

- A. Iodoform test
- B. Benedict's test

C. Fehling's test

D. Aldol condensation

Answer: A

 [View Text Solution](#)

12. The best oxidising agent for oxidation of

$CH_3 - CH = CH - CHO$ to $CH_3 - CH = CH - COOH$ is

A. Baeyer's reagent

B. Tollens' reagent

C. Schiff's reagent

D. acidified dichromate.

Answer: B

 [View Text Solution](#)

13. Which of the following statements is not correct ?

A. Aldehydes and ketones are functional isomers.

B. Formaldehyde reacts with ammonia to form hexamethyleneteramine.

C. $LiAlH_4$ converts ketones into sec- alcohols.

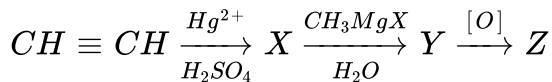
D. Ethanal and propanal give positive iodoform test.

Answer: D



[View Text Solution](#)

14. In the following sequence of reaction, the final product (Z) is



A. ethanal

B. propan - 2 - ol

C. propanone

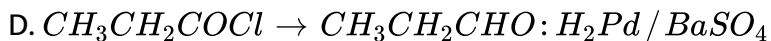
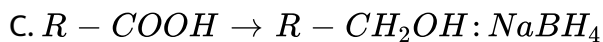
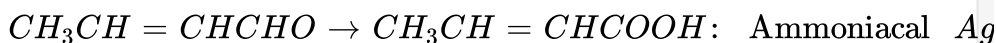
D. propane - 1 - ol

Answer: C

 [Watch Video Solution](#)

15. Which of the following reagents are not correctly matched with the reaction ?

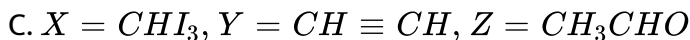
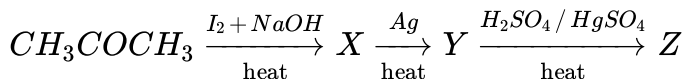
A.



Answer: B

 [View Text Solution](#)

16. Identify (X), (Y) and (Z) in the given reaction.

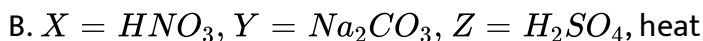
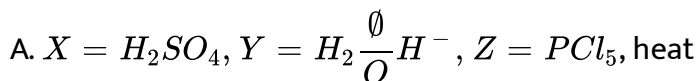


Answer: C



Watch Video Solution

17. Identify (X), (Y) and (Z) reagents in the given sequence of reaction.



D. $X = H_2SO_4 / Hg^{2+}$, $Y = CH_3MgBr / H_2O$, $Z = K_2CrO_7 / H^+$

Answer: D

 [View Text Solution](#)

18. Which of the following does not answer iodoform test ?

A. n - Butyl alcohol

B. sec - Butyl alcohol

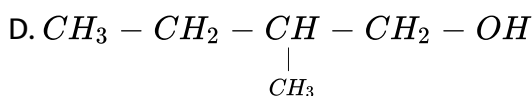
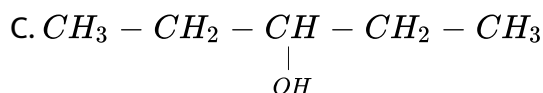
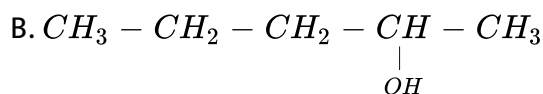
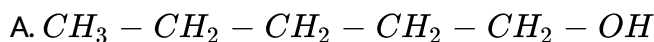
C. Acetophenone

D. Acetaldehyde

Answer: A

 [Watch Video Solution](#)

19. A compound 'A' having the molecular formula $C_5H_{12}O$, on oxidation gives a compound 'B' with molecular formula $C_5H_{10}O$. Compound 'B' gave a 2, 4- dinitrophenylhydrazine derivative but did not answer haloform test or silver mirror test. The structure of compound 'A' is



Answer: C



[View Text Solution](#)

20. Write a test to differentiate between pentan-2-one and pentan-3-one.

A. Pentan - 2 -one will give silver mirror test.

B. Pentan - 2 - one will give iodoform test.

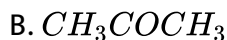
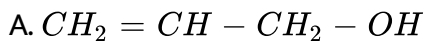
C. Pentan - 3 - one will give iodoform test.

D. None of these.

Answer: B

 [Watch Video Solution](#)

21. An organic compound of molecular formula C_3H_6O did not give a silver mirror with with Tollens' reagent but give an oxime with hydroxylamine. It may be

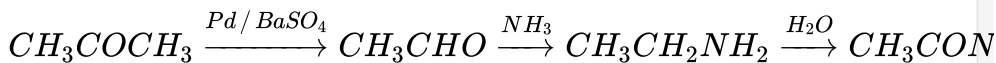


Answer: B

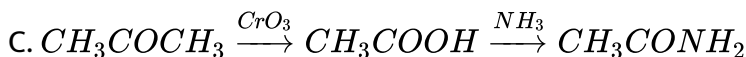
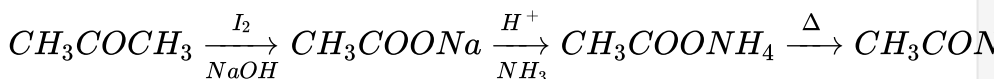
[View Text Solution](#)

22. Which is the correct method of synthesising acetamide from acetone?

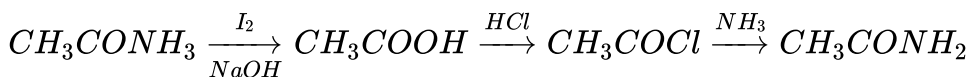
A.



B.



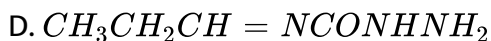
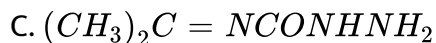
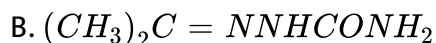
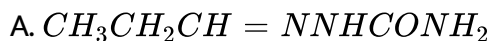
D.



Answer: B

[View Text Solution](#)

23. Compound (X) with molecular formula C_3H_8O is treated with acidified potassium dichromate to form a product (Y) with molecular formula C_3H_6O . (Y) does not form a shining silver mirror on warming with ammoniacal $AgNO_3$. (Y) when treated with an aqueous solution of $NH_2CONHNH_2$, HCl and sodium acetate, gives a product (Z). The structure of (Z) is



Answer: B



[View Text Solution](#)

24. Few simple chemical tests are given below to differentiate between the pairs of compounds. Which of the following tests is not correct for

differentiation ?

- A. Propanal and propanone - Silver mirror test
- B. Acetophenone and benzophenone - Iodoform test
- C. Ethanal and propanal - Fehling's test
- D. Benzoic acid and ethyl benzoate - Sodium bicarbonate test

Answer: C



[View Text Solution](#)

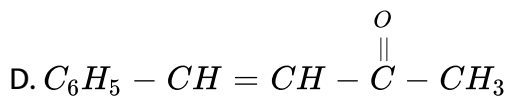
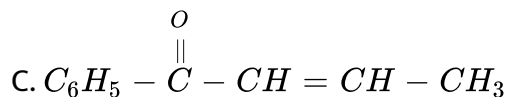
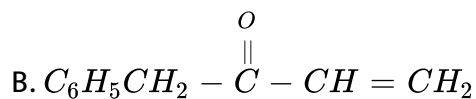
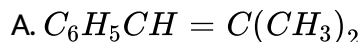
25. Which of the following will not give aldol condensation ?

- A. Phenyl acetaldehyde
- B. 2 - Methylpentanal
- C. Benzaldehyde
- D. 1 - Phenylpropanone

Answer: C

 [Watch Video Solution](#)

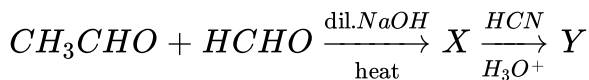
26. The claisen schmidt condensation product of benzaldehyde and acetone is

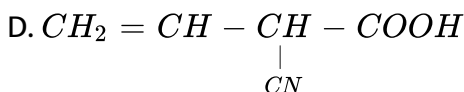
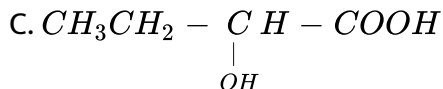
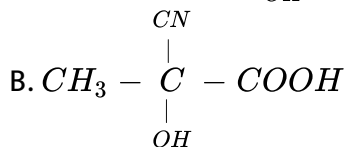
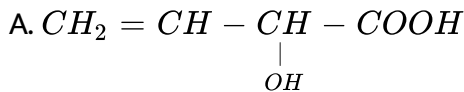


Answer: D

 [Watch Video Solution](#)

27. Study the following sequence of reaction and identify the product (Y).

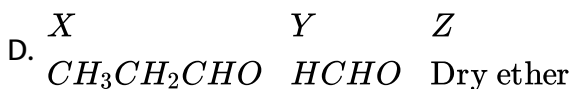
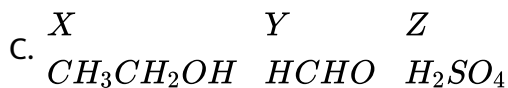
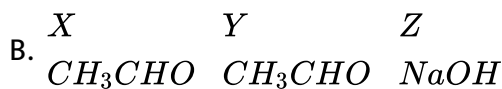
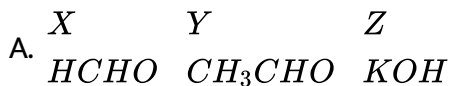
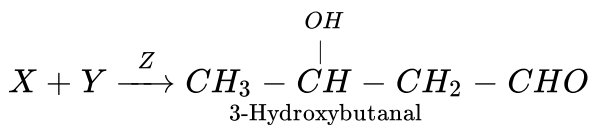




Answer: A

 Watch Video Solution

28. Identify (X), (Y) and (Z) in the given reaction.

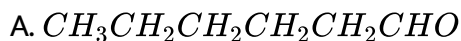


Answer: B



[Watch Video Solution](#)

29. Propanal on treatment with dilute sodium hydroxide gives



Answer: C



[Watch Video Solution](#)

30. Aldehydes that do not undergo aldol condensation are

(1) propanal (2) trichloroethanal (3) 2- phenylethanal (4) ethanal (5) benzaldehyde

A. 3 and 4 only

B. 2 and 5 only

C. 1, 2 and 3 only

D. 2, 3 and 5 only

Answer: B

 [Watch Video Solution](#)

31. The order of reactivity of

CH_3CHO , $CH_3COC_2H_5$ and CH_3COCH_3 is

A. $CH_3CHO > CH_3COCH_3 > CH_3COC_2H_5$

B. $C_2H_5COCH_3 > CH_3COCH_3 > CH_3CHO$

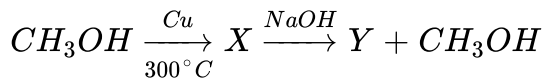
C. $CH_3COCH_3 > CH_3CHO > C_2H_5COCH_3$

D. $CH_3COCH_3 > C_2H_5COCH_3 > CH_3CHO$

Answer: A

 [Watch Video Solution](#)

32. The final product (Y) in the following sequence of chemical reaction is



- A. an alkene
- B. a carboxylic acid
- C. an aldehyde
- D. sodium salt of carboxylic acid.

Answer: D

 [Watch Video Solution](#)

33. Which of the following is a correct statement ?

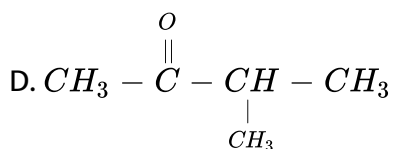
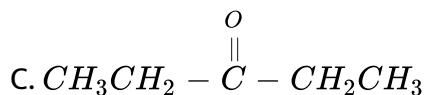
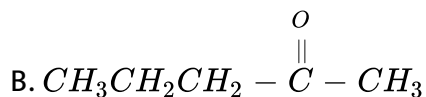
- A. $CCl_3 - CHO$ gives aldol condensation.

- B. When mixture of ethanal and propanal is treated with aqueous NaOH, the product contains four aldols.
- C. Mixture of HCHO and CH_3CHO will not give aldol condensation.
- D. HCHO is least reactive towards oxidation.

Answer: B

 [View Text Solution](#)

34. Which of the following is the most reactive isomer ?



Answer: A



View Text Solution

35. When propanal reacts with 2- methylpropanal in presence of NaOH, four different products are formed. The reaction is known as

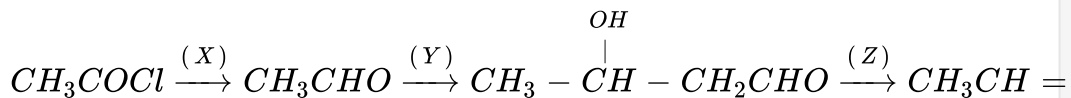
- A. aldol condensation
- B. cross aldol condensation
- C. Cannizzaro reaction
- D. HVZ condensation.

Answer: B



View Text Solution

36. Fill in the reagents for the given conversion :



- A. X Y Z
 $H_2/Pd/BaSO_4$ dil. $NaOH$ heat
- B. X Y Z
 $NaOH$ Hydrolysis heat
- C. X Y Z
 $I_2/NaOH$ $LiAlH_4$ H_3O^+
- D. X Y Z
 CrO_3 Warm CO_2

Answer: A

 [Watch Video Solution](#)

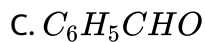
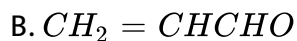
37. Which compound is obtained when acetaldehyde is treated with dilute solution of caustic soda ?

- A. Sodium acetate
- B. Resinous mass
- C. Aldol
- D. Ethyl acetate

Answer: C

 [Watch Video Solution](#)

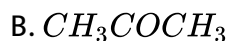
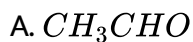
38. Which of the following compounds will undergo self aldol condensation in the presence of cold dilute alkali ?

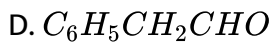
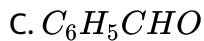


Answer: D

 [Watch Video Solution](#)

39. Which of the following compounds will undergo Cannizzaro reaction ?





Answer: C

 [Watch Video Solution](#)

40. Which of the following does not undergo Cannizzaro reaction?

A. Benzaldehyde

B. 2 - Methylpropanal

C. p - Methoxybenzaldehyde

D. 2, 2 - Dimethylpropanal

Answer: B

 [Watch Video Solution](#)

41. Fill in the blanks by suitable choices.

The carbon atom in carbonyl group is ____ hybridised. The carbonyl group in aldehydes and ketone undergoes _____. The carbonyl group in aldehydes and ketones undergoes _____ reactions. Aldehydes which have α -H atom undergo _____ reaction while aldehydes which have no α -H atom undergo _____ reaction.

- A. sp^3 nucleophilic substitutions, aldol condensation, Cannizzaro
- B. sp , electrophilic substitution, Cannizzaro, aldol condensation
- C. sp^2 , nucleophilic addition, aldol condensation, Cannizzaro
- D. sp^3 , electrophilic addition, Cannizzaro, aldol condensation

Answer: C



Watch Video Solution

42. Match the column I with column II and mark the appropriate choice .

Column I		Column II	
(A)	Clemmensen reduction	(i)	Conc. KOH
(B)	Rosenmund reduction	(ii)	Zn/Hg + conc. HCl
(C)	Iodoform reaction	(iii)	H ₂ /Pd-BaSO ₄
(D)	Cannizzaro reaction	(iv)	NaOH + I ₂

A. (A) → (i), (B) → (iii), (C) → (ii), (D) → (iv)

B. (A) → (iii), (B) → (iv), (C) → (i), (D) → (ii)

C. (A) → (ii), (B) → (iii), (C) → (iv), (D) → (i)

D. (A) → (iv), (B) → (i), (C) → (ii), (D) → (iii)

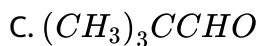
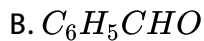
Answer: C



Watch Video Solution

43. Which of the following aldehydes will show Cannizzaro reaction ?

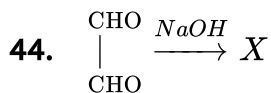
A. HCHO



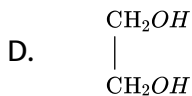
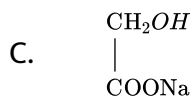
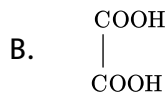
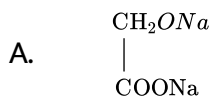
D. All of these.

Answer: D

 [Watch Video Solution](#)



The product (X) will be



Answer: C

 [Watch Video Solution](#)

45. An organic compound (X) with molecular formula $C_9H_{10}O$ gives positive 2, 4-DNP and Tollens'tests. It undergoes Cannizzaro reaction and on vigorous oxidation it gives 1, 4-benzenedicarboxylic acid. Compound (X) is

- A. Benzaldehyde
- B. o-methylbenzaldehyde
- C. p-ethylbenzaldehyde
- D. 2, 2-dimethylhexanal.

Answer: C



View Text Solution

46. Match the column I with column II and mark the appropriate choice .

	Column I		Column II
(A)	$RCOCH_3 \xrightarrow[HCl]{Zn-Hg} RCH_2CH_3$	(i)	Wolff-Kishner reduction
(B)	$2C_6H_5CHO \xrightarrow{NaOH} C_6H_5COONa + C_6H_5CH_2OH$	(ii)	Clemmensen reduction
(C)	$C_6H_6 + CH_3COCl \xrightarrow[AlCl_3]{Anhy.} C_6H_5COCH_3$	(iii)	Friedel-Crafts reaction
(D)	$C_6H_{10}O \xrightarrow[\text{glycol, } \Delta]{(i) NH_2NH_2, KOH/ethylene} C_6H_{12} + N_2$	(iv)	Cannizzaro reaction

A. (A) \rightarrow (ii), (B) \rightarrow (iv), (C) \rightarrow (iii), (D) \rightarrow (i)

B. (A) \rightarrow (i), (B) \rightarrow (iii), (C) \rightarrow (ii), (D) \rightarrow (iv)

C. (A) \rightarrow (iii), (B) \rightarrow (ii), (C) \rightarrow (i), (D) \rightarrow (iv)

D. (A) \rightarrow (iv), (B) \rightarrow (i), (C) \rightarrow (ii), (D) \rightarrow (iii)

Answer: A

 [Watch Video Solution](#)

47. What are correct steps to convert acetaldehyde to acetone?

A. CH_3MgBr , H_2O , Oxidation

B. Oxidation, $Ca(OH)_2$, Heat

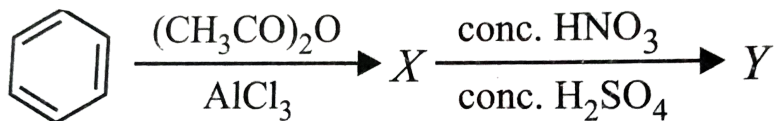
C. Reduction, KCN, Hydrolysis

D. Oxidation C_2H_5ONa , heat

Answer: B

 [Watch Video Solution](#)

48. Identify the products (X) and (Y) in the given reaction:



A. X = Acetophenone, Y = m-Nitroacetophenone

B. X = Toluene, Y = m-Nitroacetotoluene

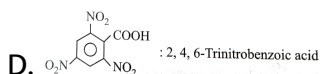
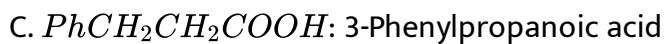
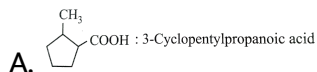
C. X = Acetophenone, Y = o and p - Dinitroacetophenone

D. X = Benzaldehyde, Y = m-Nitrobenzaldehyde

Answer: A

 [Watch Video Solution](#)

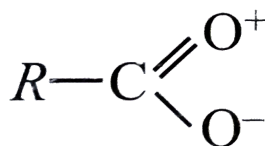
49. Which of the following IUPAC names is not correctly matched?



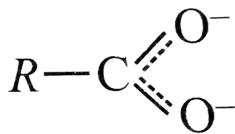
Answer: A

 [View Text Solution](#)

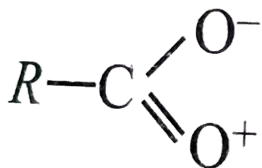
50. The correct structure representation of carboxylate ion is



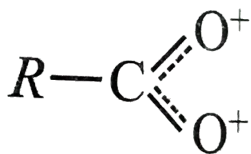
B.



C.



D.



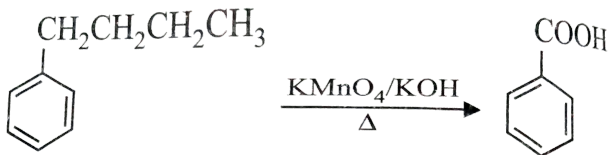
Answer: B

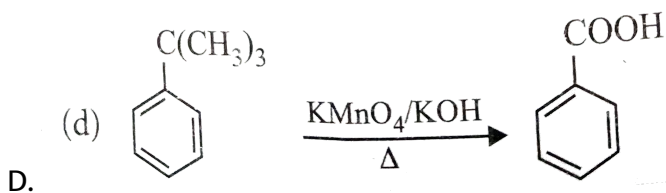
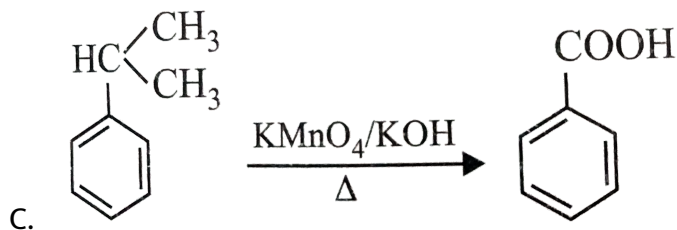
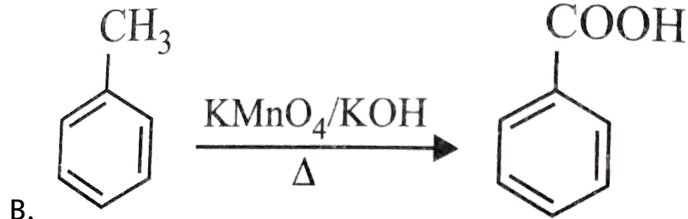


View Text Solution

51. Which of the following reactions does not occur ?

A.





Answer: D

 [Watch Video Solution](#)

52. Which of the following will not yield acetic acid on strong oxidation ?

A. Butanone

B. Propanone

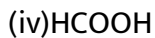
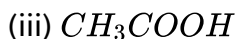
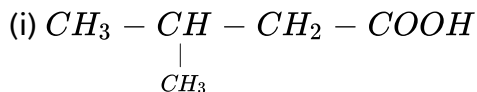
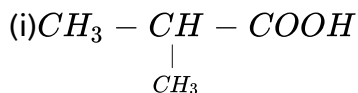
C. Ethyl ethanoate

D. Ethanol

Answer: C

 [Watch Video Solution](#)

53. Various products formed on oxidation of 2, 5-dimethylhexan-3-one are



A. (i) and (iii)

B. (i), (ii) and (iii)

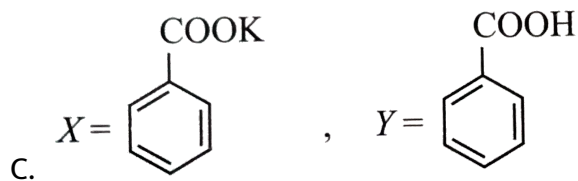
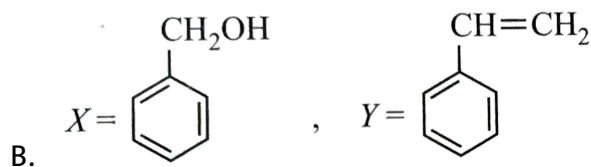
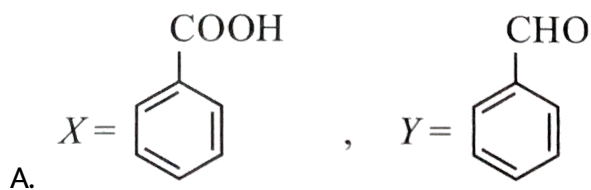
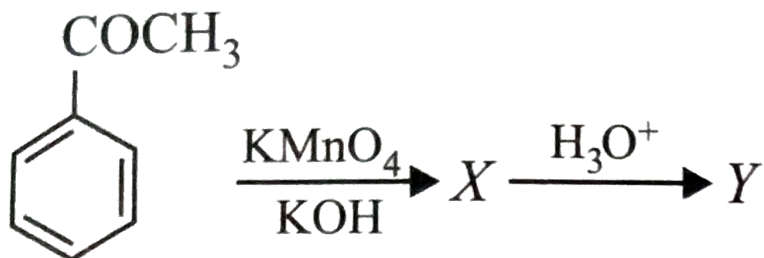
C. (i) , (ii), (iii) and (iv)

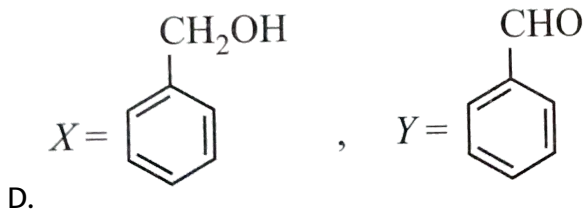
D. (iii) and (iv)

Answer: C

 View Text Solution

54. Identify (X) and (Y) in the given reaction sequence.





Answer: C

 [Watch Video Solution](#)

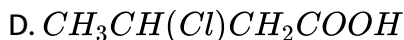
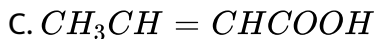
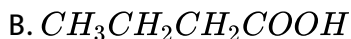
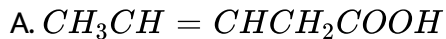
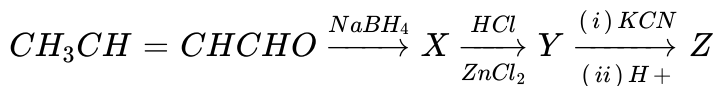
55. α -hydroxypropanoic acid can be prepared from ethanal by following the steps given in the sequence.

- A. Treat with HCN followed by acidic hydrolysis.
- B. Treat with $NaHSO_3$ followed by reaction with Na_2CO_3 .
- C. Treat with H_2SO_4 followed by hydrolysis.
- D. Treat with $K_2Cr_2O_7$ in presence of sulphuric acid.

Answer: A

 [View Text Solution](#)

56. The end product (Z) in the given sequence of reaction is

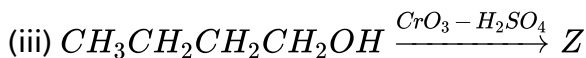
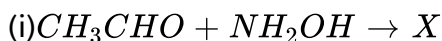


Answer: A

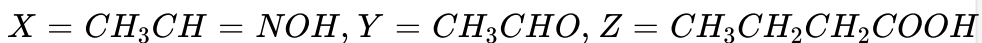


Watch Video Solution

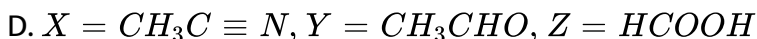
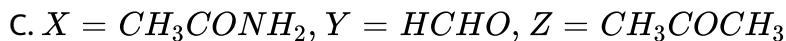
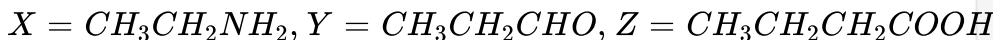
57. Complete the reactions with appropriate products.



A.



B.

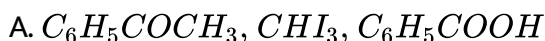


Answer: A



[View Text Solution](#)

58. An aromatic compound (X) ($\text{C}_8\text{H}_8\text{O}$) gives positive 2, 4-DNP test. It gives a yellow precipitate of compound (Y) on reaction with iodine and sodium hydroxide solution. (X) does not give Tollens' test on oxidation under drastic conditions. It gives a carboxylic acid (Z) ($\text{C}_7\text{H}_6\text{O}_2$). (Z) is also formed with (Y) during the reaction. (X), (Y) and (Z) respectively are



B. CH_3COCH_3 , CHI_3 , CH_3COOH

C. $C_6H_5COCH_3$, CHI_3 , CH_3COOH

D. CH_3CHO , CHI_3 , C_6H_5COOH

Answer: A

 [View Text Solution](#)

59. Carboxylic acids dimerise due to

A. high molecular weight

B. coordinate bonding

C. intermolecular hydrogen bonding

D. covalent bonding.

Answer: C

 [Watch Video Solution](#)

60. Which of the following carboxylic acids is highly insoluble

- A. Propanoic acid
- B. Butanoic acid
- C. Pentanoic acid
- D. Decanoic acid

Answer: D



Watch Video Solution

61. Which of the following compounds would have the smallest value for

pK_a ?

- A. $CHF_2CH_2CH_2COOH$
- B. $CH_3CH_2CF_2COOH$
- C. $CH_2FCHFCH_2COOH$
- D. $CH_3CF_2CH_2COOH$

Answer: B



[View Text Solution](#)

62. $-OH$ group present in alcohols is neutral while it is acidic in carboxylic acid because

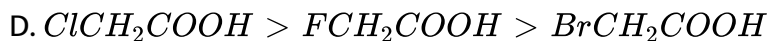
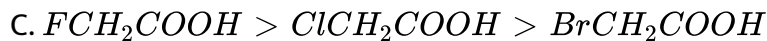
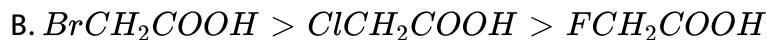
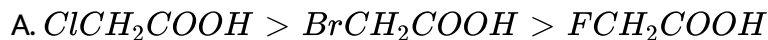
- A. in carboxylic acid $-OH$ group is attached to electron withdrawing carbonyl group
- B. in alcohols $-OH$ group is attached to alkyl group which is electron withdrawing
- C. carboxylic group is an electron releasing group
- D. alcoholic group is an electron withdrawing group.

Answer: A



[View Text Solution](#)

63. Which of the following is the correct order of relative strength of acids ?



Answer: C



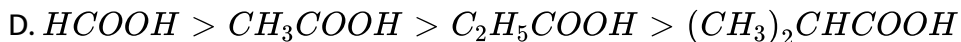
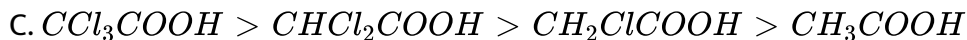
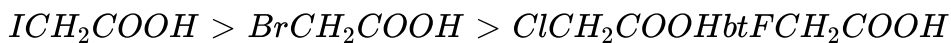
[View Text Solution](#)

64. Which of the following orders is not correct for the decreasing order of acidic character ?

A.



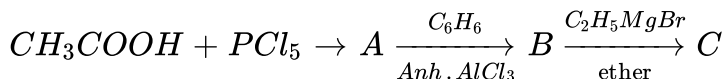
B.



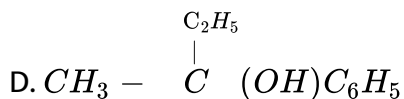
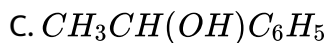
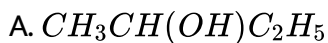
Answer: B

 View Text Solution

65. In a set of the given reactions, acetic acid yielded a product iC.



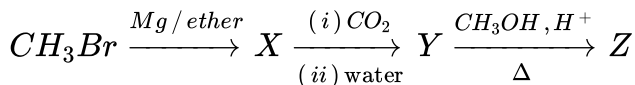
Product C would be



Answer: D

 [View Text Solution](#)

66. Identify the compounds (X), (Y) and (Z) in the following reaction :



A. (X) = CH_3MgBr , (Y) = CH_3COOH , (Z) = CH_3COOCH_3

B.

(X) = CH_3CH_2Br , (Y) = CH_3CH_2OH , (Z) = $CH_3CH_2CH_2CH_3$

C.

(X) = CH_3CH_2MgBr , (Y) = CH_3CH_2COOH , (Z) = $CH_3CH_2COOCH_3$

D.

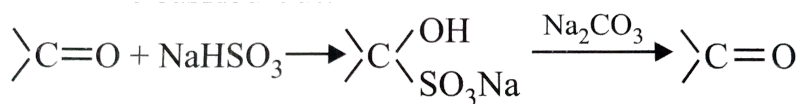
(X) = CH_3COOH , (Y) = $CH_3CH_2COCH_3$, (Z) = CH_3COOCH_3

Answer: A

 [View Text Solution](#)

Mcqs Chemical Reactions

1. Study the given reaction and identify the process which is carried out.



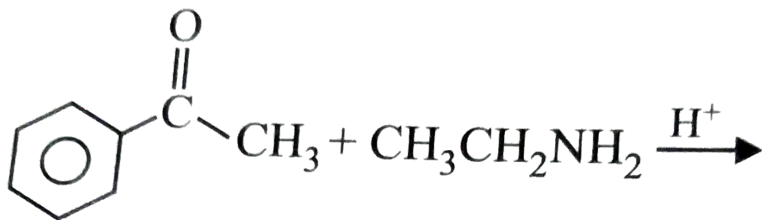
- A. It is used for purification of aldehydes and ketones .
- B. It is used to distinguish aldehydes from ketones.
- C. It is used to prepare cyclic aldehydes and ketones.
- D. It is used to study polar nature of aldehydes and ketones.

Answer: A

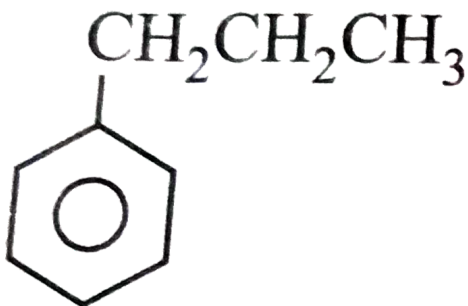


[View Text Solution](#)

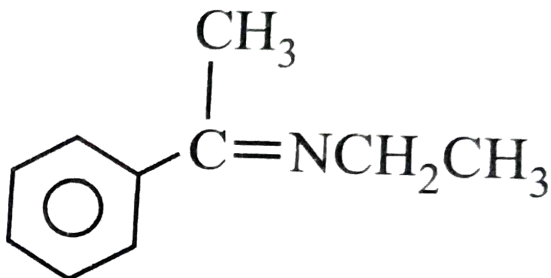
2. Find the product of the given reaction.



A.

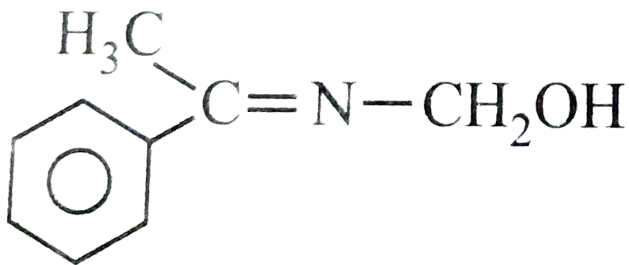


B.



C.





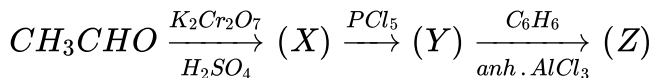
D.

Answer: B

 [View Text Solution](#)

Mcqs Chemical Reactions

1. Identify (X), (Y) and (Z) in the given reaction :



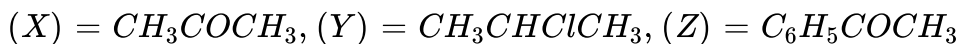
A. (X) = $HCOOH$, (Y) = $COCl_2$, (Z) = C_6H_5Cl

B. (X) = CH_3COOH , (Y) = CH_3COCl , (Z) = $C_6H_5COCH_3$

C.

(X) = CH_3COOH , (Y) = $CH_3CH_2CH_2Cl$, (Z) = $C_6H_5CH_2CH_2C$

D.

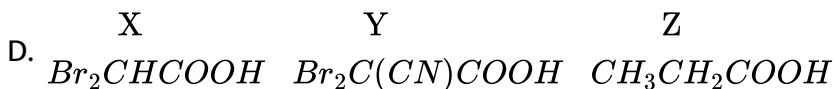
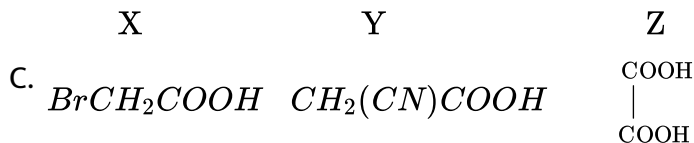
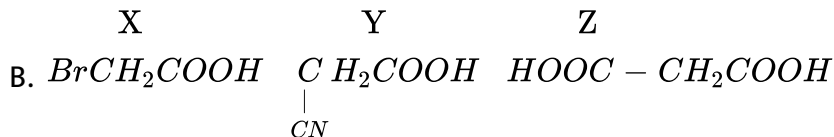
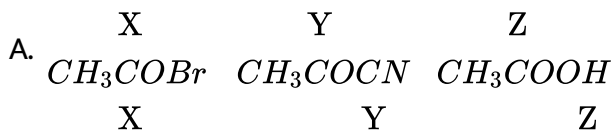
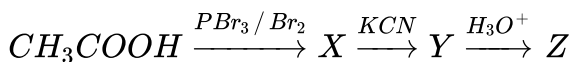


Answer: B



View Text Solution

2. Complete the missing links (X), (Y) and (Z) by making an appropriate choice.



Answer: B





[View Text Solution](#)

3. What happens when a carboxylic acid is treated with lithium aluminum hydride ?

- A. Aldehyde is formed.
- B. Primary alcohol is formed.
- C. Ketone is formed.
- D. Grignard reagent is formed.

Answer: B



[Watch Video Solution](#)

4. A compound (X) having molecular formula $C_4H_8O_2$ is hydrolysed by water in presence of an acid to give a carboxylic acid (Y) and an alcohol (Z). (Z) on oxidation with chromic acid gives (Y), (X), (Y) and (Z) are

- A.

X	Y	Z
CH_3COOCH_3	CH_3COOH	CH_3OH

- B. $\begin{matrix} X & Y & Z \\ CH_3COOC_2H_5 & CH_3COOH & C_2H_5OH \end{matrix}$
- C. $\begin{matrix} X & Y & Z \\ C_2H_5COOCH_3 & C_2H_5COOH & C_2H_5OH \end{matrix}$
- D. $\begin{matrix} X & Y & Z \\ CH_3COOC_2H_5 & C_2H_5COOH & CH_3OH \end{matrix}$

Answer: B

 [View Text Solution](#)

5. A compound (X) with a molecular formula $C_5H_{10}O$ gives a positive 2, 4-DNP test but a negative Tollens' test. On oxidation it gives a carboxylic acid (Y) with a molecular formula $C_3H_6O_2$. Potassium salt of (Y) undergoes Kolbe's reaction and gives a hydrocarbon (Z). (X), (Y) and (Z) respectively are

- A. pentan - 3 - one, propanoic acid, butane
- B. pentanal, pentanoic acid, octane
- C. 2 - methylbutanone, butanoic acid, hexane
- D. 2, 2 - dimethylpropanone, propanoic acid, hexane.

Answer: A



[View Text Solution](#)

6. Fill in the blanks.

In Hell-Volhard-Zelinsky reaction, the carboxylic acids are halogenated at _____ position by using _____ and _____.

- A. α , NaOH, iodine
- B. α , phosphorus, halogen
- C. β , phosphorus, H_2O
- D. β , PCl_5 , $NaOH$

Answer: B



[Watch Video Solution](#)

7. Acetic acid can be halogenated in presence of phosphorus and chlorine.

Formic acid cannot be halogenated with same way because of

- A. presence of α - H atom in formic acid
- B. presence of α - H atom in acetic acid
- C. absence of α - H atom in CH_3COOH
- D. higher acidic strength of acetic acid than formic acid.

Answer: B



[View Text Solution](#)

8. Which of the following will not undergo HVZ reaction ?

- A. Propanoic acid
- B. Ethanoic acid
- C. 2 - Methylpropanoic acid
- D. 2, 2 - Dimethylpropanoic acid

Answer: D



[View Text Solution](#)

9. Which of the following statements is correct regarding formic acid ?

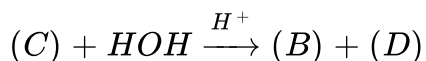
- A. It is a reducing agent.
- B. It is a weaker acid than acetic acid.
- C. It is an oxidising agent.
- D. When its calcium salt is heated it forms acetone.

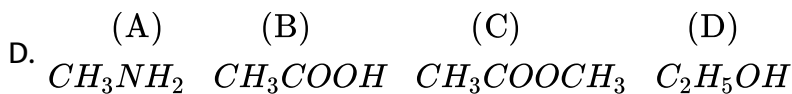
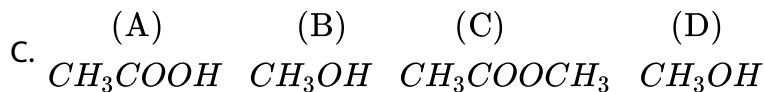
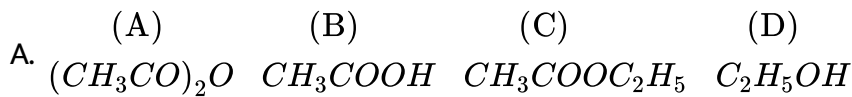
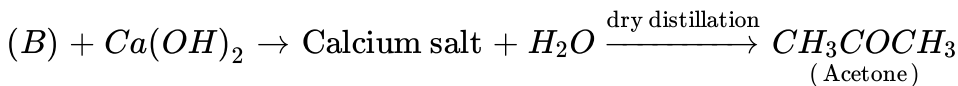
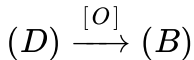
Answer: A



[View Text Solution](#)

10. Study the following reactions and mark the appropriate choice.

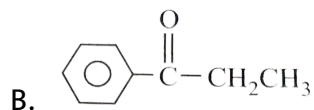
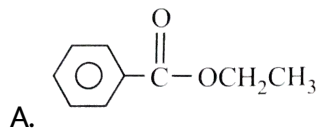
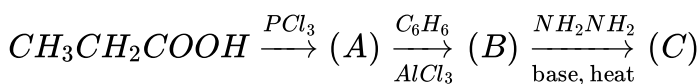


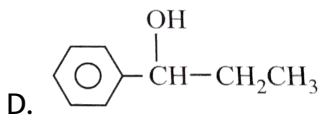
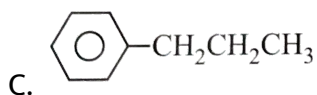


Answer: A

 [View Text Solution](#)

11. The final product (C) obtained in the reaction sequence is





Answer: C

 [View Text Solution](#)

Higher Order Thinking Skills

1. An alcohol (A) on dehydration gives (B) which adds bromine molecule to give (C), (C) on heating with sodamide gives (D) which on hydration in the presence of Hg^{++} / H_2SO_4 gives (E). E on reduction by lithium aluminium hydride gives (A). (E) is also obtained on dry distillation of calcium salt of acetic acid. How many enolisable proton present in the product (E) ?

A. 2

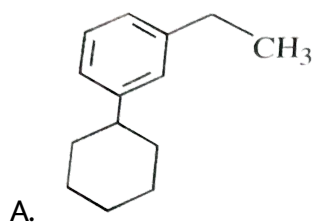
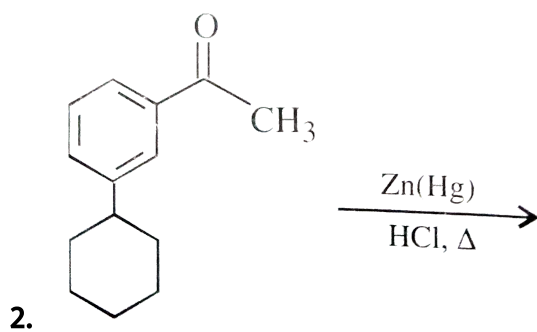
B. 6

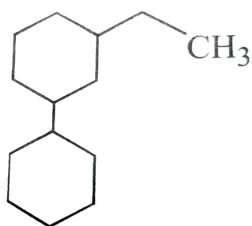
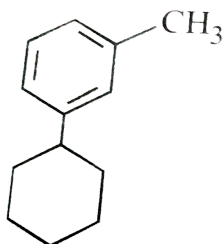
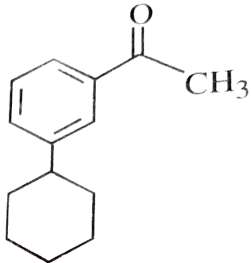
C. 3

D. 0

Answer: B

 [View Text Solution](#)



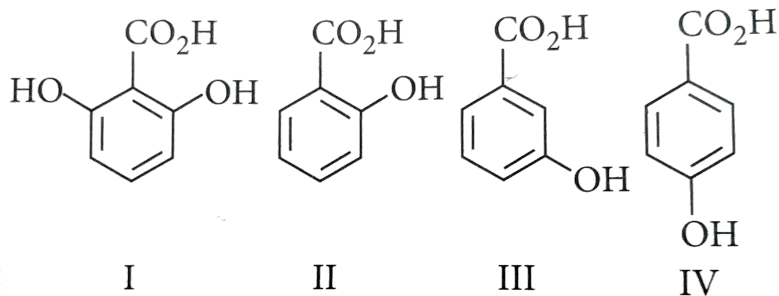


Answer: A



Watch Video Solution

3. The correct order of acidity for the following compounds is



A. $I > II > III > IV$

B. $III > I > II > IV$

C. $III > IV > II > I$

D. $I > III > IV > II$

Answer: A

 [Watch Video Solution](#)

4. The carbonyl compound producing an optically active product by reaction with $LiAlH_4$ is

A. propanone

B. butanone

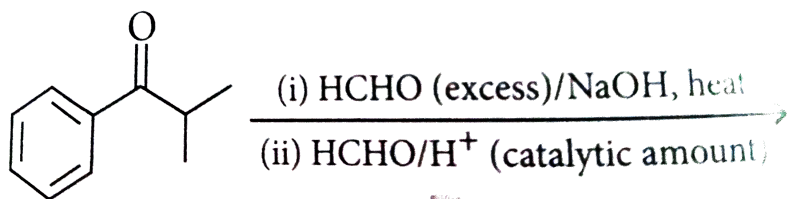
C. 3-pentanone

D. benzophenone.

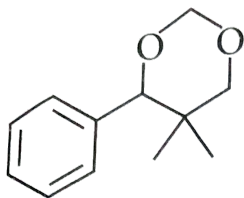
Answer: B

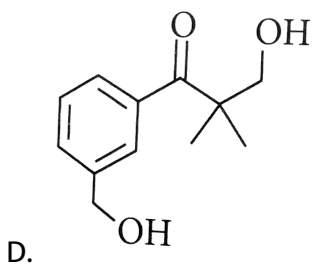
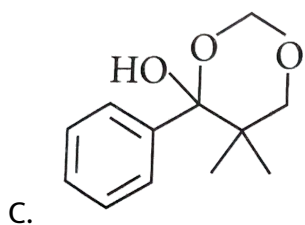
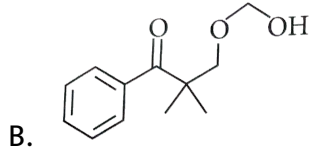
 Watch Video Solution

5. The major product of the following reaction sequence is



A.

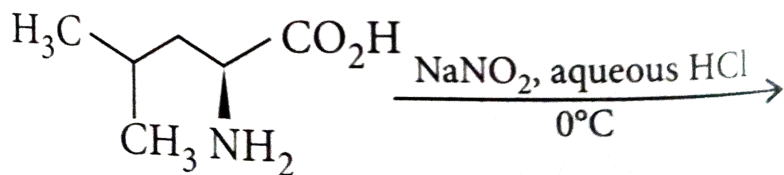


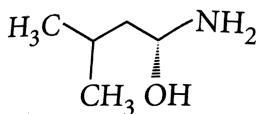


Answer: A

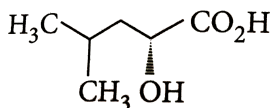
 [View Text Solution](#)

6. The major product of the reaction is

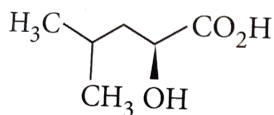




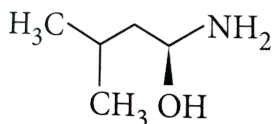
A.



B.



C.



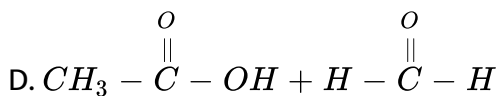
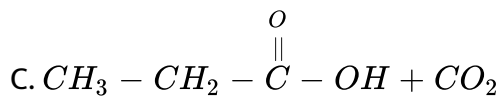
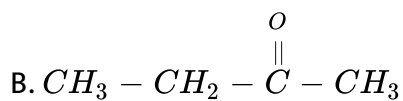
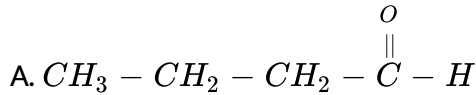
D.

Answer: C

 [View Text Solution](#)

Ncert Exemplar

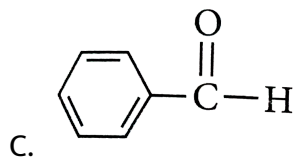
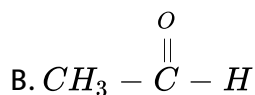
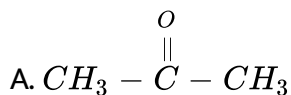
1. Addition of water to alkynes occurs in acidic medium and in the presence of Hg^{2+} ions as a catalyst. Which of the following products will be formed on addition of water to but-1-yne under these conditions ?

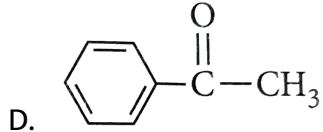


Answer: B

 [Watch Video Solution](#)

2. Which of the following compounds is most reactive towards nucleophilic addition reactions ?





Answer: B

 [View Text Solution](#)

3. The correct order of increasing acidic strength is ____.

A. phenol It ethanol It ethanol It chloroacetic acid It acetic acid

B. ethanol It phenol It chloroacetic acid It acetic acid

C. ethanol It phenol It acetic acid It chloroacetic acid

D. chloroacetic acid It acetic It phenol It ethanol

Answer: C

 [View Text Solution](#)

4. Compound $Ph - O - \overset{O}{\parallel} C - Ph$ can be prepared by the reaction of _____ .

- A. phenol and benzoic acid in the presence of NaOH
- B. phenol and benzoyl chloride in the presence of pyridine
- C. phenol and benzoyl chloride in the presence of $ZnCl_2$
- D. phenol and benzaldehyde in the presence of palladium

Answer: B

 [View Text Solution](#)

5. The reagent which does not react with both, acetone and benzaldehyde is _____ .

- A. sodium hydrogensulphite.
- B. phenyl hydrazine

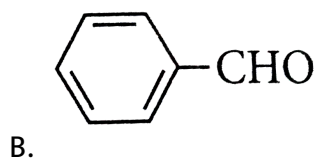
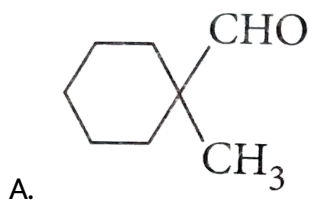
C. Fehling's solution

D. Grignard reagent

Answer: C

 [View Text Solution](#)

6. Cannizzaro's reaction is not given by _____ .

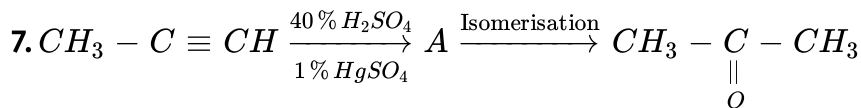


C. HCHO

D. CH_3CHO

Answer: D

 [View Text Solution](#)



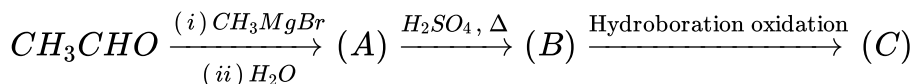
Structure of 'A' and type of isomerism in the above reaction are respectively

- A. prop-1-en-2-ol, metamerism
- B. prop-1-en-1-ol, tautomerism
- C. prop-2-en-2-ol, geometrical isomerism
- D. prop-1-en-2-ol, tautomerism.

Answer: D

 View Text Solution

8. Compounds (A) and (C) in the following reactions are

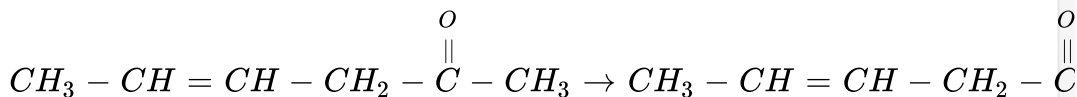


- A. identical
- B. positional isomers
- C. functional isomers
- D. optical isomers.

Answer: B

 [Watch Video Solution](#)

9. Which is the most suitable reagent for the following conversion ?



- A. Tollens' reagent
- B. Benzoyl peroxide
- C. I_2 and NaOH solution
- D. Sn and NaOH solution

Answer: C



[View Text Solution](#)

10. Which of the following compound will give butanone on oxidation with alkaline $KMnO_4$ solution ?

- A. Butan-1-ol
- B. Butan-2-ol
- C. Both of these
- D. None of these.

Answer: B



[Watch Video Solution](#)

11. In Clemmensen reduction carbonyl compound is treated with _____.

- A. zinc amalgam + HCl
- B. sodium amalgam + HCl

C. zinc amalgam + nitric acid

D. sodium amalgam + HNO_3

Answer: A



Watch Video Solution

Assertion And Reason

1. Assertion : In formaldehyde all the four atoms lie in one plane.

Reason : Carbonyl carbon forms a π -bond with oxygen by overlapping of p-orbitals.

A. If both assertion and reason are true and reason is the correct explanation of assertion.

B. If both assertion and reason are true but reason is not the correct explanation of assertion.

C. If assertion is true but reason is false.

D. If both assertion and reason are false.

Answer: B

 [Watch Video Solution](#)

2. Assertion : Acetaldehyde can be prepared by addition of water to ethyne in the presence of H_2SO_4 and $HgSO_4$.

Reason : Higher alkynes give higher aldehydes.

- A. If both assertion and reason are true and reason is the correct explanation of assertion.
- B. If both assertion and reason are true but reason is not the correct explanation of assertion.
- C. If assertion is true but reason is false.
- D. If both assertion and reason are false.

Answer: C

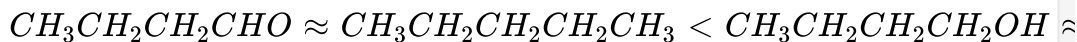
3. Assertion : Etard reaction helps to stop the oxidation of toluene at the aldehyde stage.

Reason : Chromyl chloride oxidises methyl group to a chromium complex, which on hydrolysis gives corresponding benzaldehyde.

- A. If both assertion and reason are true and reason is the correct explanation of assertion.
- B. If both assertion and reason are true but reason is not the correct explanation of assertion.
- C. If assertion is true but reason is false.
- D. If both assertion and reason are false.

Answer: A

4. Assertion : The boiling points of given compounds follow the order :



Reason : Boiling point depends upon molecular mass only.

- A. If both assertion and reason are true and reason is the correct explanation of assertion.
- B. If both assertion and reason are true but reason is not the correct explanation of assertion.
- C. If assertion is true but reason is false.
- D. If both assertion and reason are false.

Answer: D



[View Text Solution](#)

5. Assertion : Acetaldehyde is more reactive than acetone in nucleophilic addition reactions.

Reason Two alkyl groups in acetone reduce the electrophilicity of the carbon.

- A. If both assertion and reason are true and reason is the correct explanation of assertion.
- B. If both assertion and reason are true but reason is not the correct explanation of assertion.
- C. If assertion is true but reason is false.
- D. If both assertion and reason are false.

Answer: A

 [View Text Solution](#)

6. Assertion : β - hydrogen atom of carbonyl compounds is acidic in nature.

Reason : β - hydrogen is directly attached to carbon next to carbonyl carbon.

- A. If both assertion and reason are true and reason is the correct explanation of assertion.
- B. If both assertion and reason are true but reason is not the correct explanation of assertion.
- C. If assertion is true but reason is false.
- D. If both assertion and reason are false.

Answer: D



[View Text Solution](#)

7. Assertion : Cross aldol condensation of ethanal and propanal gives a mixture of four products.

Reason : Ethanal and propanal, both contain α -hydrogen atom.

- A. If both assertion and reason are true and reason is the correct explanation of assertion.

- B. If both assertion and reason are true but reason is not the correct explanation of assertion.
- C. If assertion is true but reason is false.
- D. If both assertion and reason are false.

Answer: A

 [Watch Video Solution](#)

8. Assertion : Aromatic aldehydes and formaldehyde undergo Cannizzaro reaction.

Reason : Those aldehydes which have α -H atom undergo Cannizzaro reaction.

- A. If both assertion and reason are true and reason is the correct explanation of assertion.
- B. If both assertion and reason are true but reason is not the correct explanation of assertion.

C. If assertion is true but reason is false.

D. If both assertion and reason are false.

Answer: C



Watch Video Solution

9. Assertion : Aromatic aldehydes and ketones undergo electrophilic substitution reaction at metaposition.

Reason : Carbonyl group activates the ring towards electrophilic substitution reactions.

A. If both assertion and reason are true and reason is the correct explanation of assertion.

B. If both assertion and reason are true but reason is not the correct explanation of assertion.

C. If assertion is true but reason is false.

D. If both assertion and reason are false.

Answer: C

 [Watch Video Solution](#)

10. Assertion : In the presence of alkaline $KMnO_4$ 4-methylacetophenone is oxidised to benzoic acid.

Reason : Keto group is oxidised to $-COOH$ group.

- A. If both assertion and reason are true and reason is the correct explanation of assertion.
- B. If both assertion and reason are true but reason is not the correct explanation of assertion.
- C. If assertion is true but reason is false.
- D. If both assertion and reason are false.

Answer: D

 [Watch Video Solution](#)

11. Assertion : Most carboxylic acids exist as dimers in the vapour phase or in aprotic solvents.

Reason : Higher carboxylic acids are practically insoluble in water due to the increased hydrophobic interaction of hydrocarbon part.

- A. If both assertion and reason are true and reason is the correct explanation of assertion.
- B. If both assertion and reason are true but reason is not the correct explanation of assertion.
- C. If assertion is true but reason is false.
- D. If both assertion and reason are false.

Answer: B



Watch Video Solution

12. Assertion : Phenol and benzoic acid can be distinguished by Na_2CO_3 .

Reason : Benzoic acid is stronger acid than phenol, hence reacts with Na_2CO_3 .

- A. If both assertion and reason are true and reason is the correct explanation of assertion.
- B. If both assertion and reason are true but reason is not the correct explanation of assertion.
- C. If assertion is true but reason is false.
- D. If both assertion and reason are false.

Answer: A



[Watch Video Solution](#)

13. Assertion : Direct attachment of groups such as phenyl or vinyl to the carboxylic acid, increases the acidity of the carboxylic acid.

Reason : Resonance effect always increases the acidity of carboxylic acids.

- A. If both assertion and reason are true and reason is the correct explanation of assertion.
- B. If both assertion and reason are true but reason is not the correct explanation of assertion.
- C. If assertion is true but reason is false.
- D. If both assertion and reason are false.

Answer: C

 [View Text Solution](#)

14. Assertion : $(CH_3)_3CCOOH$ does not give HVZ reaction.

Reason : $(CH_3)_3CCOOH$ does not have α -hydrogen atom.

- A. If both assertion and reason are true and reason is the correct explanation of assertion.

B. If both assertion and reason are true but reason is not the correct explanation of assertion.

C. If assertion is true but reason is false.

D. If both assertion and reason are false.

Answer: A

 [View Text Solution](#)

15. Assertion : Carboxylic acids do not undergo Friedel - Crafts reaction.

Reason : Carboxyl group is meta-directing group.

A. If both assertion and reason are true and reason is the correct explanation of assertion.

B. If both assertion and reason are true but reason is not the correct explanation of assertion.

C. If assertion is true but reason is false.

D. If both assertion and reason are false.

Answer: B



View Text Solution