



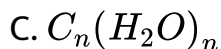
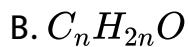
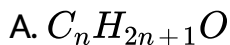
## CHEMISTRY

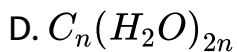
### BOOKS - NCERT FINGERTIPS CHEMISTRY (HINGLISH)

### BIOMOLECULES

#### Carbohydrates

1. The general formula of carbohydrate is





**Answer: C**



[View Text Solution](#)

2. Which of the following compounds is found abundantly in nature?

A. Fructose

B. Starch

C. Glucose

D. Cellulose

**Answer: D**



[Watch Video Solution](#)



3. Cellulose is a protein.

- A. hexapolysaccharide
- B. pentapolysaccharide
- C. tripolysaccharide
- D. none of these

**Answer: D**



**Watch Video Solution**

4. Which of the following is non-reducing sugar ?

- A. Glucose
- B. Sucrose

C. Maltose

D. Lactose

**Answer: B**



[Watch Video Solution](#)

5. Which of the following is an example of aldopentose

A. D-Ribose

B. Glyceraldehyde

C. Fructose

D. Erythrose

**Answer: A**



[Watch Video Solution](#)

6. Which of the following treatment will convert starch directly into glucose ?

- A. Heating with dilute  $H_2SO_4$
- B. Fermentation by diastase
- C. Fermentation by zymase
- D. Heating with dilute NaOH

**Answer: A**



[View Text Solution](#)

7. Glucose  $\xrightarrow{HCN}$   $\xrightarrow{\text{hydrolysis}}$   $\xrightarrow{HI \text{ heat}}$  A, A is :

- A. 2-Iodoheptane

B. Heptane-2-ol

C. 2-Iodohexane

D. Heptanoic acid

**Answer: D**



**Watch Video Solution**

8. Glucose reacts with excess  $Br_2/H_2O$  to give the major product

A. saccharic acid

B. glucaric acid

C. gluconic acid

D. valeric acid

**Answer: C**



**Watch Video Solution**

**9. Glucose reacts with acetic anhydride to form**

A. 3

B. 5

C. 4

D. 1

**Answer: B**



**Watch Video Solution**

10. The letter *D* in D-glucose signifies.

- A. dextrorotatory
- B. configuration
- C. diamagnetic nature
- D. mode of synthesis

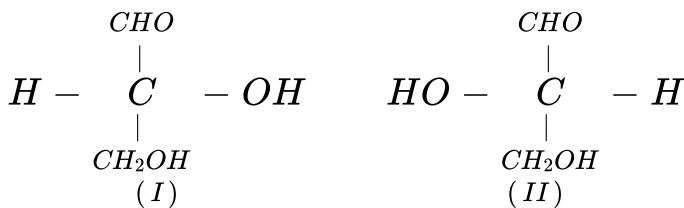
**Answer: B**



[Watch Video Solution](#)

11. The given structures (I) and (II) represent configuration of the simplest sugar glyceraldehyde . Which of the following

statements is not correct for the structures ?



A. (I) represents D-form while (II) represents L-form of glyceraldehyde .

B. The sugars having same configuration as D-glyceraldehyde are designated as D-sugars.

C. Natural glucose and fructose are D-Sugars.

D. D is dextrorotatory while L is laevorotatory enantiomer.

**Answer: D**



**Watch Video Solution**

12. Pick up the incorrect statement from the following.

- A. Glucose exists in two different crystalline forms ,  $\alpha - D$ -glucose and  $\beta - D$ -glucose
- B. Cyclic structure of  $\alpha - D$  - glucose and  $\beta - D$ -glucose is called pyranose structure.
- C.  $\alpha - D$ -glucose and  $\beta - D$ -glucose are enantiomers.
- D. Cellulose is a straight chain polysaccharide made up of only  $\beta$ -glucose units.

**Answer: C**



**Watch Video Solution**

13. Which of the following carbon is anomeric in glucose



A. C-1 carbon

B. C-2 carbon

C. C-5 carbon

D. C-6 carbon

**Answer: A**



**Watch Video Solution**

**14.** A diabetic person carries a packet of glucose with him always because

A. glucose increases the blood sugar level slowly.

B. glucose reduces the blood sugar level

C. glucose increases the blood sugar level almost instantaneously

D. glucose reduce the blood sugar level slowly.

**Answer: C**



**Watch Video Solution**

**15.** What is the essential difference between  $\alpha$  - and -  $\beta$  - forms of glucose ?

A. isomers of D(+) glucose and L(-) glucose respectively

B. diastereomers of glucose

C. anomers of glucose

D. isomers which differ in the configuration of C-2

**Answer: C**



**Watch Video Solution**

**16. How many atoms are there in pyranose ring ?**

A. 3

B. 5

C. 6

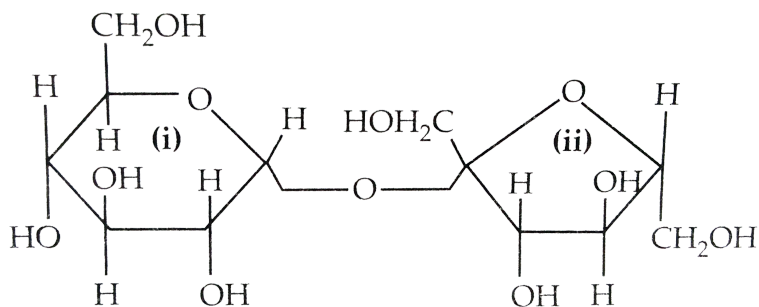
D. 7

**Answer: C**



**Watch Video Solution**

17. The correct statement about the following disaccharide



- A. ring (i) is pyranose with  $\alpha$ - glycosidic link
- B. ring (i) furanose with  $\alpha$  – glycosidic link
- C. ring (ii) is pyranose with  $\alpha$ -glycosidic link.
- D. ring (ii) is pyranose with  $\beta$ -glycosidic link .

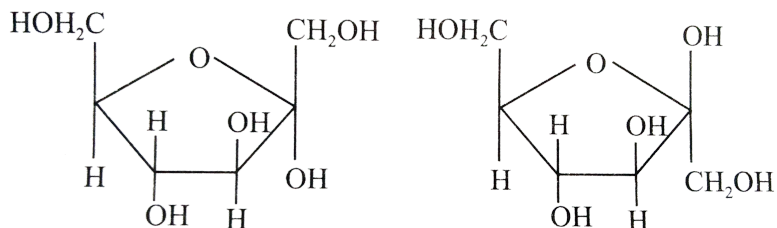
**Answer: A**



**Watch Video Solution**

18. Five-membered ring structures of fructose are given below .

Mark the incorrect statement .



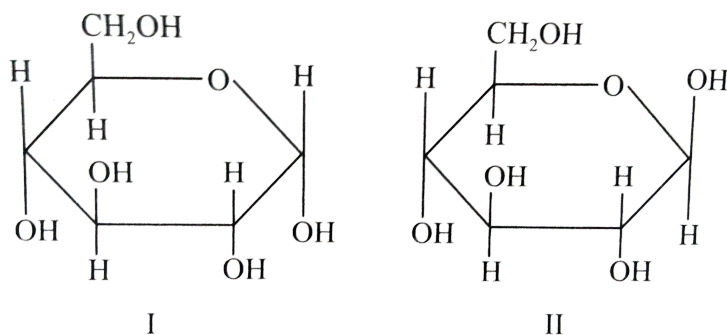
- A. The five-membered ring structures are named as furanose structure.
- B. The cyclic structures represent two anomers of fructose.
- C. Five-membered ring structures are named as pyranose structures.
- D. These are also called Haworth structures.

**Answer: C**



**Watch Video Solution**

19. Study the structures of  $\alpha - D(+)$  glucopyranose and  $\beta - D(+)$  glucopyranose and mark the correct statement.



- A. Structures I and II are enantiomers
- B. Structures I and II are anomers
- C. The two structures I and II differ in the configuration of  $C_1$  and  $C_4$
- D. Both the structures I and II give 2,4-DNP test.

**Answer: B**

 [Watch Video Solution](#)

20. Among the naturally occurring carbohydrates, furanose ring is found in the

- A. glucose unit of cane sugar
- B. glucose unit of cellulose
- C. fructose unit of cane sugar
- D. galactose unit of lactose.

**Answer: C**

 [View Text Solution](#)

21. Which one of the following sets of monosaccharides forms sucrose ?

- A.  $\alpha$ -D- galactopyranose and  $\alpha$ -D-glucopyranose
- B.  $\alpha$ -D-glucopyranose and  $\beta$ -D-fructofuranose
- C.  $\alpha$ -D-glucopyranose and  $\beta$ -D-fructopyranose
- D.  $\alpha$ -glucopyranose and  $\beta$ -D-fructopyranose

**Answer: B**

 [Watch Video Solution](#)

**22. What are the hydrolysis products of sucrose ?**

- A. Fructose+Fructose
- B. Glucose + Glucose
- C. Glucose +Galactose
- D. Glucose+Fructose



**Answer: D**



**Watch Video Solution**

**23. Glycosidic linkage is :**

- A. amide linkage
- B. ester linkage
- C. ether linkage
- D. acetyl linkage.

**Answer: C**



**Watch Video Solution**

24. Invert sugar is mixture of

- A. a type of cane sugar
- B. optically inactive form of sugar
- C. mixture of glucose and galactose
- D. mixture of glucose and fructose in equimolar quantities

**Answer: D**



[Watch Video Solution](#)

25. Which of the following statements is not true ?

- A. Glucose and fructose both are monosaccharides
- B. The natural glucose and fructose are D-forms.

C. The solution having equal molecules of D-glucose and D-fructose is termed as invert sugar.

D. Aldohexoses exist in  $2^6$  optical forms

**Answer: D**



**Watch Video Solution**

**26. Maltose is made up of :**

A. two  $\alpha$ -D-glucose

B. normal  $\beta$  - D-glucose

C.  $\alpha$ -and  $\beta$  - D-glucose

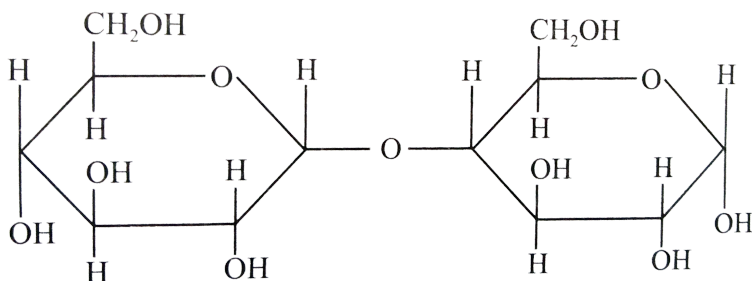
D. fructose

**Answer: A**



Watch Video Solution

27. Study the structures of maltose and mark the incorrect statement .



- A. Maltose is composed of two  $\alpha$ -D-glucose units.
- B. C-1 of one glucose is linked to C-4 of other unit.
- C. It is a non-reducing sugar.
- D. It is a disaccharide.

Answer: C



Watch Video Solution

28. Which one of the following is not correct ?

- A. D(-) Fructose exists in furanose structure
- B. D(+) Glucose exists in pyranose structure.
- C. In sucrose the two monosaccharides are held together by peptide linkage
- D. Maltose is a reducing sugar.

**Answer: C**



**Watch Video Solution**

29. Which one of the following statements is not true regarding ( + ) Lactose ?

- A. On hydrolysis , (+)lactose gives equal amount of D(+) glucose and D(+) galactose .
- B. (+) Lactose is a  $\beta$ -glucoside formed by the union of a molecule of D(+) glucose and a molecule of D(+) galactose.
- C. (+) Lactose is a reducing sugar and does not exhibit mutarotation .
- D. (+) Lactose , $C_{12}H_{22}O_{11}$  contains 8-OH groups.

**Answer: C**



**Watch Video Solution**

**30. Glycosidic linkage in maltose/amylose is**

- A.  $C_1 - C_4 \beta$  linkage
- B.  $C_1 - C_6 \beta$  linkage
- C.  $C_1 - C_6 \alpha$  -linkage
- D.  $C_1 - C_4 \alpha$  - linkage

**Answer: D**



**Watch Video Solution**

**31. The chemical formula of starch is**

- A.  $(C_6H_{12}O_6)_n$
- B.  $(C_6H_{10}O_5)_n$
- C.  $C_{12}H_{22}O_{11}$
- D.  $(C_6H_{12}O_4)_n$

**Answer: B**



**Watch Video Solution**

**32.** Cellulose, starch and glycogen are all the polysaccharides which contain:

- A. amylopectin and glycogen
- B. amylose and glycogen
- C. amylose and amylopectin
- D. cellulose and glycogen

**Answer: C**



**Watch Video Solution**



33. In cellulose, D-glycosidic units are joined by

- A.  $\alpha$ -1,4 glycosidic linkage
- B.  $\beta$ -1,6 glycosidic linkage
- C.  $\beta$ -1,4 glycosidic linkage
- D. peptide linkage

**Answer: C**



**Watch Video Solution**

34. Cellulose in the form of plants is a food for cattles and sheeps but not for human beings. Explain.

- A. human body does not contain cellulose hence cellulose cannot be broken into D-glucose

B. human saliva cannot break down plant cellulose in small pieces

C. bile juice present in cattle helps them to digest cellulose

D. human beings have a smaller stomach than cattle.

**Answer: A**



**Watch Video Solution**

**35.** Carbohydrates are stored in human body as the polysaccharide:

A. starch

B. glycogen

C. cellulose

D. amylose

**Answer: B**



**Watch Video Solution**

## Proteins

1. A compound which contains both ..... And .....is called amino acid. The amino acids in polypeptide chain are joined by .....bonds.

- A. amino, carboxylic , group , ester
- B. amino, carboxylic group, peptide.
- C. nitrogen , carbon , glycosidic
- D. hydroxy, carboxylic group, peptide.

**Answer: B**



**Watch Video Solution**

2. Which of the following statements about amino acids is false

- A. They are constituents of all proteins
- B. Alanine having one amino and one carboxylic group.
- C. Most naturally occurring amino acids have D-configuration.
- D. Glycine is the only naturally occurring amino acid which is optically inactive.

**Answer: C**



**Watch Video Solution**

3. One of the different amino acids which can be synthesised in the body is:

A. Alanine

B. Lysine

C. Valine

D. Histidine

**Answer: A**



**Watch Video Solution**

4. The  $\alpha$ -amino acid which contains the aromatic side chain is:

A. proline

B. tyrosine

C. valine

D. serine

**Answer: B**



**Watch Video Solution**

5. The number of amino acids found in proteins that a human body can synthesize is

A. 20

B. 25

C. 10

D. 100

**Answer: A**



**Watch Video Solution**

**6. Which of the following is a basic amino acid ?**

A. Lysine

B. proline

C. Alanine

D. Aspartic acid

**Answer: A**



**Watch Video Solution**

7. which of the following is acidic amino acid?

A. Glycine

B. Valine

C. Leucine

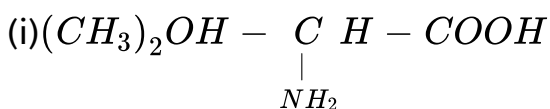
D. Glutamic acid

**Answer: D**

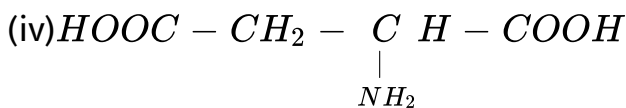
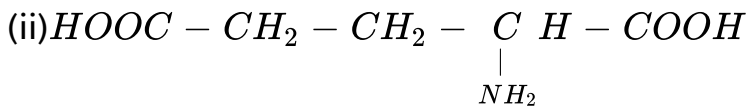


[Watch Video Solution](#)

8. Amino acids are classified as acidic, basic or neutral depending upon the relative number of amino and carboxyl groups in their molecule. Which of following are acidic ?







A. (ii) and (iv)

B. (iii) and (iv)

C. (i) and (ii)

D. (ii) and (iii)

**Answer: A**



**Watch Video Solution**

**9.** Amino acids usually exist in the form of Zwitter ions. This means that they consist of

A. basic- $NH_2$  group and acidic -COOH group

B. the basic  $-NH_3^+$  group and acidic  $-COO^-$  group

C. basic  $-NH_2$  and acidic  $-H^+$  group

D. basic  $-COO^-$  group and acidic  $-NH_3^+$  groups

**Answer: D**



**Watch Video Solution**

**10.** Which compound can exist in a dipolar (zwitter ion) state

A.  $C_6H_5CH_2CH(N = CH_2)COOH$

B.  $(CH_3)_2CHCH(NH_2)COOH$

C.  $C_6H_5CONHCH_2COOH$

D.  $HOOCCH_2CH_2COCOOH$

**Answer: B**



**Watch Video Solution**

**11. Which of the following statements is not correct ?**

- A. Only  $\alpha$ -amino acids are obtained on hydrolysis of proteins
- B. The amino acids which are synthesised in the body are known as non-essential amino acids.
- C. There are 20 essential amino acids.
- D. L-amino acids are represented by writing the  $-NH_2$  group on the left side.

**Answer: C**



12. The melting points and solubility in water of amino acids are generally higher than that of the corresponding halo acids.

Explain.

A. amino acids exist as zwitter ions resulting in strong dipole-dipole attraction

B. amino acids are optically active

C. due to higher molecular mass of  $-NH_2$  group molecular mass of amino acids is higher

D. they interact with water more than halo-acids and have salt like structure .

**Answer: A**



Watch Video Solution

13. Which of the following polymers are condensation polymes?

- A.  $\alpha$ -amino acids
- B.  $\beta$ -amino acids
- C.  $\alpha$ -hydroxy acids
- D.  $\beta$ -hydroxy acids.

**Answer: A**



Watch Video Solution

14. Which of the following statements is not correct ?

- A. Proteins are polyamides formed from amino acids.

B. Except glycine, all other amino acids show optical activity.

C. Natural proteins are commonly made up of L-isomer of amino acids.

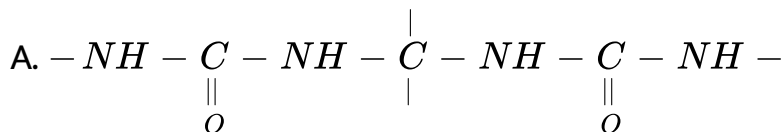
D. In  $\alpha$ -amino acids,  $-NH_2$  and  $-COOH$  groups are attached to different carbon atoms.

**Answer: D**

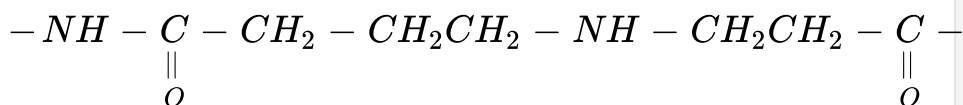


**Watch Video Solution**

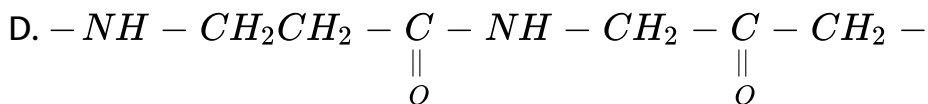
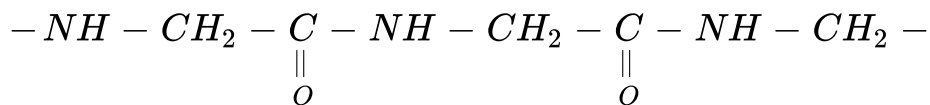
15. Which of the following represents a peptide chain ?



B.



C.



**Answer: C**



**Watch Video Solution**

**16.** Which of the following is the correct statement ?

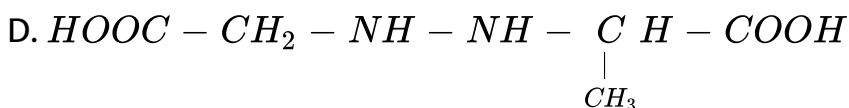
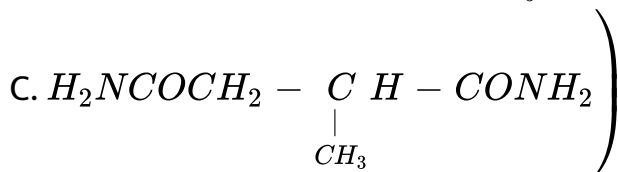
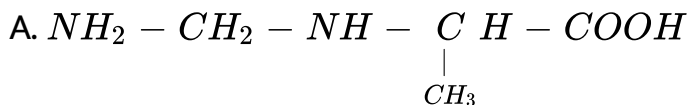
- A. Starch is a polymer of  $\alpha$ -glucose
- B. Amylose is not a component of starch
- C. Proteins are composed of only one type of amino acid.
- D. In cyclic structure of fructose, there are five carbon and one oxygen atoms.

Answer: A



Watch Video Solution

17. The peptide linkage formed between glycine ( $NH_2CH_2COOH$ ) and alanine  $NH_2CH - COOH$  to give glycyloalanine can be shown as



Answer: B



 [Watch Video Solution](#)

18. In fibrous proteins, polypeptide chains are held together by..... .

- A. van der Waals forces
- B. electrostatic forces of attraction
- C. hydrogen bonds
- D. covalent bonds.

**Answer: C**

 [Watch Video Solution](#)

19. Keratin is a protein having larger amount of

A. hair

B. wool

C. silk

D. all of these

**Answer: D**



**Watch Video Solution**

**20. Globular proteins are present in:**

A. blood

B. eggs

C. milk

D. all of these

**Answer: D**



**Watch Video Solution**

**21. Mark the incorrect example.**

- A. Keratin and myosin-Fibrous proteins
- B. Insulin and albumins -Globular proteins
- C. Glycylalanine-Dipeptide
- D. Enzymes and haemoglobin -Derived proteins

**Answer: D**



**View Text Solution**

22. Primary structure of protein is due to

- A. sequence in which  $\alpha$ -amino acids are linked to one another
- B. sequence in which amino acid of one polypeptide chain are joined to other chain
- C. the folding patterns of polypeptide chains
- D. the pattern in which the polypeptide chains are arranged.

**Answer: A**



[Watch Video Solution](#)

23. Secondary structure of proteins refers to

- A. sequence of amino acids in polypeptide chain
- B. bonds between alternate polypeptide chains
- C. folding patterns of polypeptide chain
- D. bonding between  $NH_3^+$  and  $COO^-$  of two peptides.

**Answer: C**



**Watch Video Solution**

**24.** Most common types of secondary structures of proteins are

:

- A.  $\alpha$ -helix and  $\beta$  – helix structures
- B.  $\alpha$ -helix and  $\beta$ -pleated sheet structures
- C. right and left hand twisted structures

D. globular and fibrous structures

**Answer: B**

 [Watch Video Solution](#)

25.  $\alpha$  – helix is a secondary structure of proteins formed by twisting of polypeptide chain into right handed screw like structure. Which type of interactions are responsible for making the  $\alpha$ -helix structure stable?

A. Peptide bonds between  $-NH_2$  and  $-CO$  groups of adjacent carbon chains.

B. Hydrogen bonds between  $-NH$  of amino acid in one turn with  $-CO$  of amino acid to adjacent turn.

C.  $-OH$  group of one amino acid with  $-CO$  group of other amino acid on the turn.

D. Hydrogen bonds between adjacent amino acids.

**Answer: B**



**Watch Video Solution**

**26.** Which of the following statements is true for proteins ?

A. They act as antibodies

B. They act as hormones.

C. They catalyse the biochemical reactions.

D. all of these

**Answer: D**



[View Text Solution](#)

27. Denaturation of proteins leads to loss of its biological activity by

- A. formation of amino acids
- B. loss of primary structure
- C. loss of both primary and secondary structure
- D. loss of both secondary and tertiary structure

**Answer: D**



[View Text Solution](#)

28. Mark the wrong statement about denaturation of proteins.



- A. The primary structure of the protein does not change.
- B. Globular proteins are converted into fibrous proteins
- C. Fibrous proteins are converted into globular proteins
- D. The biological activity of the protein is destroyed.

**Answer: C**



**Watch Video Solution**

**29.** Which of the following is not a function of proteins?

- A. Fomation of hair, wool , skin and nails.
- B. As a biological catalyst in the form of enzymes.
- C. As food in the form of meat, eggs.
- D. As energy provider for metabolism

**Answer: D**



**Watch Video Solution**

**30.** On boiling the egg, what structural changes are taking place in the egg white ?

- A. The colour of the egg changes from colourless to white.
- B.  $2^\circ$  and  $3^\circ$  structures are destroyed but  $1^\circ$  structure remains intact.
- C.  $1^\circ$ ,  $2^\circ$  and  $3^\circ$  structures of egg are destroyed.
- D. A reversible change takes place which can be reversed by decreasing the temperature .

**Answer: B**





[View Text Solution](#)

## Enzymes

1. Enzymes are made up of

- A. edible proteins
- B. proteins with specific structure
- C. nitrogen containing carbohydrates
- D. carbohydrates.

**Answer: B**



[Watch Video Solution](#)

2. the conversion of maltose to glucose is possible by the enzyme :

A. zymase

B. lactase

C. maltase

D. diastase.

**Answer: C**



[Watch Video Solution](#)

## Vitamines

1. Which of the following is a fat soluble vitamin

A. Vitamin A

B. Vitamin  $B_6$

C. Vitamin C

D. Vitamin  $B_2$

**Answer: A**



**Watch Video Solution**

**2. Vitamin  $B_2$  is :**

A. ascorbic acid

B. riboflavin

C. thiamine

D. pyridoxine.

**Answer: B**



**Watch Video Solution**

**3. Which of the following vitamins is water soluble**

A. Vitamin E

B. Vitamin D

C. Riboflavin

D. Retinol

**Answer: C**



**Watch Video Solution**

4. Vitamin A is present in

A. fish liver oil

B. milk

C. butter

D. all of these

**Answer: D**



[Watch Video Solution](#)

5. Vegetable oils like wheat germ oil, sunflower oil etc. are the good source of

A. vitamin K

B. vitamin E

C. vitamin D

D. vitamin A

**Answer: B**



**Watch Video Solution**

**6. Why must vitamin C be supplied regularly in diet?**

A. it is water soluble hence excreted in urine and can't be stored in the body

B. it is fat soluble hence stored in the body and cannot be used on regular basis



C. it is required in a large amount by the body hence supplied regularly

D. it is water soluble hence used by the body on daily basis and it to be supplied regularly.

**Answer: A**

 [Watch Video Solution](#)

7. Deficiency of vitamin *E* causes

A. rickets

B. scurvy

C. muscular weakness

D. beri beri

**Answer: C**



**Watch Video Solution**

8. Which of the following diseases is not correctly matched with the vitamins mentioned with it ?

- A. Vitamin  $B_2$ -Cracking of lips
- B. Vitamin C-Bone deformities
- C. Vitamin D-Osteomalacia
- D. Vitamin A-Night blindness

**Answer: B**



**Watch Video Solution**

9. Match the vitamins given in column I with the deficiency disease caused by it given in column II and mark the appropriate choice

Column I		Column II	
(A)	Vitamin B <sub>1</sub>	(i)	Convulsions
(B)	Vitamin B <sub>2</sub>	(ii)	Pernicious anaemia
(C)	Vitamin B <sub>12</sub>	(iii)	Beri beri
(D)	Vitamin B <sub>6</sub>	(iv)	Cheilosis

A. (A) → (iv), (B) → (iii), (C) → (i), (D) → (ii)

B. (A) → (i), (B) → (iv), (C) → (iii), (D) → (ii)

C. (A) → (ii), (B) → (i), (C) → (iv), (D) → (iii)

D. (A) → (iii), (B) → (iv), (C) → (ii), (D) → (i)

**Answer: D**



**Watch Video Solution**

10. Match the name of vitamins in column I with their sources in column II and mark the appropriate choice .

Column I		Column II	
(A)	Vitamin B <sub>1</sub>	(i)	Milk, yeast, cereals
(B)	Vitamin B <sub>12</sub>	(ii)	Meat, fish, egg
(C)	Vitamin A	(iii)	Carrots, butter, papaya
(D)	Vitamin C	(iv)	Citrus fruits, amla, green leafy vegetables

A. (A) → (ii), (B) → (iii), (C) → (iv), (D) → (i)

B. (A) → (iii), (B) → (ii), (C) → (iv), (D) → (i)

C. (A) → (iv), (B) → (iii), (C) → (ii), (D) → (i)

D. (A) → (i), (B) → (ii), (C) → (iii), (D) → (iv)

**Answer: D**



**Watch Video Solution**

1. Characters are transferred from parents to offspring through :

- A. gametes
- B. genes
- C. mutants
- D. enzymes

**Answer: B**



[Watch Video Solution](#)

2. Nucleic acids are made of

- A. small molecules
- B. dipeptides
- C. long chain polymers of nucleotides
- D. polypeptides

**Answer: C**



**Watch Video Solution**

**3. The human body does not produce:-**

- A. Enzyme
- B. Vitamins
- C. Proteins
- D. Nucleic acid

**Answer: B**



**Watch Video Solution**

**4. A nucleoside on hydrolysis gives**

- A. an aldopentose and a nitrogenous base
- B. an aldopentose and phosphoric acid
- C. an aldopentose, a nitrogenous base and phosphoric and
- D. a nitrogenous base and phosphoric acid

**Answer: A**



**Watch Video Solution**

5. Thymine is

- A. 5-methyluracil
- B. 4-methyluracil
- C. 3-methyluracil
- D. 1-methyluracil

**Answer: A**



[Watch Video Solution](#)

6. Guanine is an example of

- A. a nitrogenous base
- B. a nucleoside



C. a nucleotide

D. phosphate

**Answer: A**



**Watch Video Solution**

7. Bases common to RNA and DNA are

A. adenine, guanine, cytosine

B. adenine , uracil, cytosine

C. adenine, guanine, thymine

D. guanine, uracil, thymine.

**Answer: A**



**Watch Video Solution**

8. In DNA, the complimentary bases are

- A. uracil and adenine, cytosine , cytosine and guanine
- B. adenine and thymine , guanine and cytosine
- C. adenine and thymine, guanine and uracil
- D. adenine and guanine , thymine and cytosine

**Answer: B**



[Watch Video Solution](#)

9. Which of the following base is not present in DNA ?

- A. Thymine

B. Quinoline

C. Adenine

D. Cytosine

**Answer: B**



**Watch Video Solution**

**10.** A base sugar phosphate' unit in nucleic acid is known as

A. nucleotide

B. nucleoside

C. phosphotide

D. polypeptide

**Answer: A**



[Watch Video Solution](#)

11. RNA is

- A. single helix strand
- B. double helix strand
- C. right hand twisted double helix strand
- D. triple helix strand

**Answer: A**



[Watch Video Solution](#)

12. If one strand of DNA has the sequence ATGCTTGA, the sequence in the complimentary strand would be

A. TCCGAACT

B. TACGTAGT

C. TACGAATC

D. TACGAACT

**Answer: D**



**Watch Video Solution**

**13.** Match the column I with column II and mark the appropriate choice.

Column I		Column II	
(A)	Nucleoside	(i)	Sugar + base + phosphoric acid group
(B)	Nucleotide	(ii)	Cytosine + uracil
(C)	DNA	(iii)	Sugar + base
(D)	RNA	(iv)	Cytosine + thymine

- A.  $(A) \rightarrow (iii), (B) \rightarrow (i), (C) \rightarrow (iv), (D) \rightarrow (ii)$
- B.  $(A) \rightarrow (i), (B) \rightarrow (iv), (C) \rightarrow (iii), (D) \rightarrow (ii)$
- C.  $(A) \rightarrow (ii), (B) \rightarrow (iii), (C) \rightarrow (i), (D) \rightarrow (iv)$
- D.  $(A) \rightarrow (iv), (B) \rightarrow (ii), (C) \rightarrow (i), (D) \rightarrow (iii)$

**Answer: A**



**Watch Video Solution**

**14.** Match the column I with column II and mark the appropriate choice.

Column I		Column II	
(A)	Pentose sugar in DNA	(i)	Ascorbic acid
(B)	Nucleic acid	(ii)	Uracil
(C)	RNA	(iii)	Genetic material
(D)	Vitamin	(iv)	Furanose structure

- A.  $(A) \rightarrow (iv), (B) \rightarrow (iii), (C) \rightarrow (ii), (D) \rightarrow (i)$
- B.  $(A) \rightarrow (iii), (B) \rightarrow (ii), (C) \rightarrow (iv), (D) \rightarrow (i)$
- C.  $(A) \rightarrow (ii), (B) \rightarrow (iii), (C) \rightarrow (iv), (D) \rightarrow (i)$
- D.  $(A) \rightarrow (i), (B) \rightarrow (ii), (C) \rightarrow (iii), (D) \rightarrow (iv)$

**Answer: A**



**Watch Video Solution**

**15. Differentiate between *RNA* and *DNA* ?**

- A. ribose sugar and thymine in RNA
- B. deoxyribose sugar and uracil in DNA
- C. ribose sugar and uracil in RNA
- D. deoxyribose sugar and guanine in DNA

Answer: C



Watch Video Solution

16. Match the column I with column II and mark the appropriate choice.

Column I		Column II	
(A)	Peptide linkage	(i)	Inversion
(B)	Nucleic acid	(ii)	Polysaccharide
(C)	Hydrolysis of cane sugar	(iii)	Proteins
(D)	Starch	(iv)	Nucleotides

A. (A)  $\rightarrow$  (ii), (B)  $\rightarrow$  (i), (C)  $\rightarrow$  (iii), (D)  $\rightarrow$  (iv)

B. (A)  $\rightarrow$  (iv), (B)  $\rightarrow$  (i), (C)  $\rightarrow$  (ii), (D)  $\rightarrow$  (iii)

C. (A)  $\rightarrow$  (iii), (B)  $\rightarrow$  (iv), (C)  $\rightarrow$  (i), (D)  $\rightarrow$  (ii)

D. (A)  $\rightarrow$  (i), (B)  $\rightarrow$  (iii), (C)  $\rightarrow$  (iv), (D)  $\rightarrow$  (ii)



**Answer: C**



**Watch Video Solution**

**17. The double helix model of DNA was proposed by**

A. Har Gobind Khorana

B. Watson and Crick

C. A.R. Todd

D. G.W. Kenner

**Answer: B**



**Watch Video Solution**

18. When adenine is attached to ribose sugar, it is called adenosine . To make a nucleotide from it, would require

- A. oxygenation
- B. addition of a base
- C. addition of phosphate
- D. hydrogenation

**Answer: C**



**Watch Video Solution**

## Hormones

1. The hormone thyroxine

- A. is secreted by pancease
- B. is secreted by thyroid
- C. decreases blood sugar
- D. does not stimulate metabolism

**Answer: B**



**Watch Video Solution**

**2. Hyperglycemia implies**

- A. high blood-sugar level
- B. low blood-sugar level
- C. high concentration of salt in blood
- D. low concentration of salt in blood.

**Answer: A**



**Watch Video Solution**

**3. Glucocorticoids are produced by**

- A. control the carbohydrates metabolism
- B. modulate inflammatory reactions
- C. are involved in the reactions to stress
- D. all of these

**Answer: D**



**Watch Video Solution**

4. Which of the following is responsible for preparing the uterus for implantation of fertilised egg ?

- A. Testosterone
- B. Glucocorticoids
- C. Progesterone
- D. Estradiol

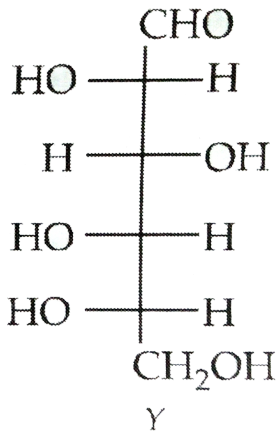
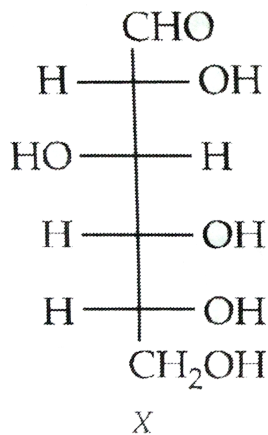
**Answer: C**



**Watch Video Solution**

**Higher Order Thinking Skills**

1. Among the following statements, about the molecules X and Y, which is incorrect?



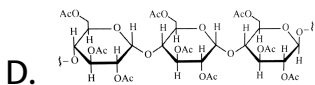
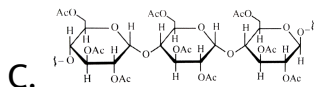
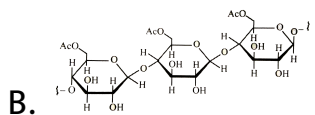
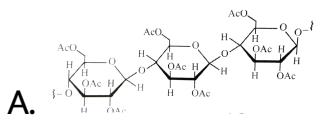
- A. X and Y are diastereomers
- B. X and Y are enantiomers.
- C. X and Y are both aldohexoses.
- D. X is a D-sugar and Y is an L-sugar

**Answer: A**



**Watch Video Solution**

2. Cellulose upon acetylation with excess acetic anhydride/  
 $H_2SO_4$  (catalytic) gives cellulose triacetate whose structure is



**Answer: A**



**Watch Video Solution**

3. During the process of digestion, the proteins present in food materials are hydrolysed to amino acids. The two enzymes

involved in the process are:

Enzyme (A)  
—————→ Polypeptides

—————→ Amino acids  
Enzyme (B)

A. invertase and zymase

B. amylase and maltase

C. diastase and lipase

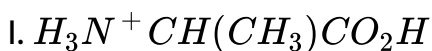
D. pepsin and trypsin

**Answer: D**

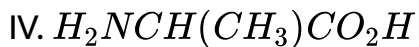
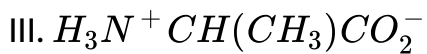
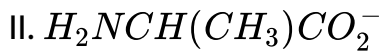


**Watch Video Solution**

4. Which the list shown below, the correct pair of structures of alanine in pH ranges 2-4 and 9-11 is







A. I,II

B. I,III

C. II, III

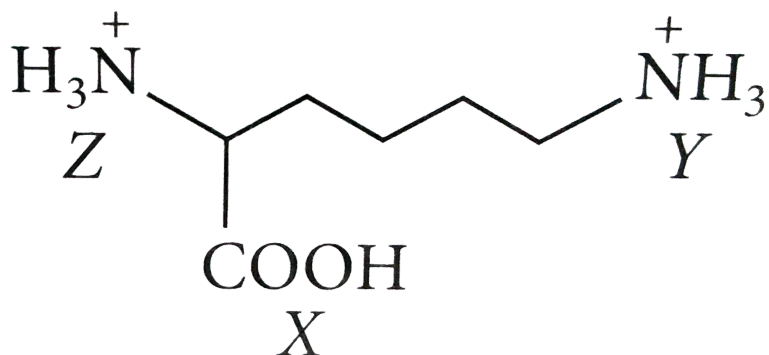
D. III,IV

**Answer: A**



**Watch Video Solution**

5. Consider the compound



and

arrange X,Y,Z in order of increasing acid strengths .

A.  $X > Z > Y$

B.  $Z < X < Y$

C.  $X > Y > Z$

D.  $Z > X > Y$

**Answer: A**



**Watch Video Solution**

6. In aqueous solution amino acids mostly exist as



Answer: D



Watch Video Solution

7. Amino acids are least soluble

A. at pH around 7

B. at pH

C. at their isoelectric points

D. none of these

**Answer: C**



[Watch Video Solution](#)

## Ncert Exemplar

1. Glycogen is a branched chain polymer of  $\alpha - D$  glucose units in which chain is formed by  $C1 - C4$  glycosidic linkage where as branching occurs by the formation of  $C1 - C6$  glycosidic linkage. Structure of glycogen is similar to ....

A. amylose

B. amylopectin

C. cellulose

D. glucose

**Answer: B**



**Watch Video Solution**

2. Which of the following polymer is stored in the liver of animals ?

A. Amylose

B. Cellulose

C. Amylopectin

D. Glycogen

**Answer: D**



[Watch Video Solution](#)

3. Sucrose (cane sugar) is a disaccharide. One molecule of sucrose on hydrolysis gives..... .

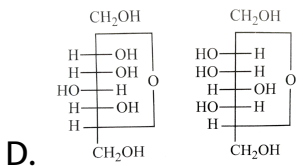
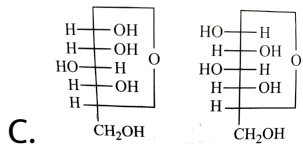
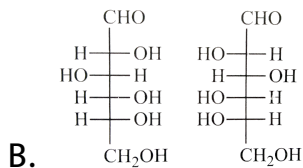
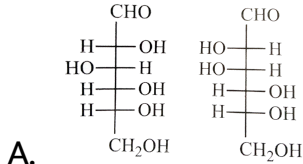
- A. 2 molecules of glucose
- B. 2 molecules of glucose +1 molecule of fructose
- C. 1 molecules of glucose +1 molecule of fructose
- D. 2 molecules of fructose

**Answer: C**



[Watch Video Solution](#)

4. Which of the following pairs represents anomers ?



**Answer: C**



**View Text Solution**

5. Proteins are found to have two different types of secondary structures viz  $\alpha$ -helix and  $\beta$ -pleated sheet structure.  $\alpha$ -helix structure of protein is stabilised by

A. peptide bonds

B. van der Waals forces

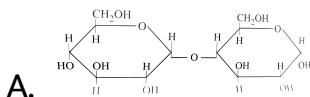
C. hydrogen bonds

D. dipole-dipole interactions

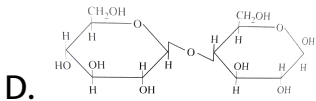
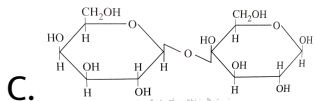
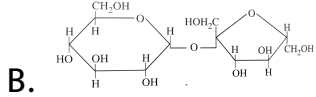
**Answer: C**

 **Watch Video Solution**

6. In disaccharides, if the reducing groups of monosaccharides, i.e., aldehydic or ketonic groups are bonded, these are non-reducing sugars. Which of the following disaccharide is a non-reducing sugar?







**Answer: B**



**Watch Video Solution**

7. Which of the following acids is a vitamin?

A. Aspartic acid

B. Ascorbic acid

C. Adipic acid

D. Saccharic acid

**Answer: B**



**Watch Video Solution**

**8.** Dinucleotide is obtained by joining two nucleotides together by phosphodiester linkage. Between which carbon atoms of pentose sugars of nucleotides are these linkages present ?

A. 5' and 3'

B. 1' and 5'

C. 5' and 5'

D. 3' and 3'

**Answer: A**



**Watch Video Solution**

9. Nucleic acids are the polymers of

A. nucleosides

B. nucleotides

C. bases

D. sugars

**Answer: B**



**Watch Video Solution**

10. Which of the following statements is not true about glucose?

A. It is an aldohexose.

B. On heating with HI it forms n-hexane

C. It is present in furanose form.

D. It does not give 2,4-DNP test.

**Answer: C**



**Watch Video Solution**

11. Each polypeptide in a protein has amino acids linked with each other in a specific sequence. This sequence of amino acids is said to be... .

A. primary structure of proteins

B. secondary structure of proteins

C. tertiary structure of proteins

D. quaternary structure of proteins

**Answer: A**



**Watch Video Solution**

12. DNA and RNA contain four bases each. Which of the following bases is not present in RNA?

A. Adenine

B. Uracil

C. Thymine

D. Cytosine

**Answer: C**



**Watch Video Solution**

13. Which of the following B group vitamins can be stored in our body?

A. Vitamin  $B_1$

B. Vitamin  $B_2$

C. Vitamin  $B_6$

D. Vitamin  $B_{12}$

**Answer: D**



**Watch Video Solution**

14. Which of the following bases is not present in DNA

A. Adenine

B. thymine

C. Cytosine

D. Uracil

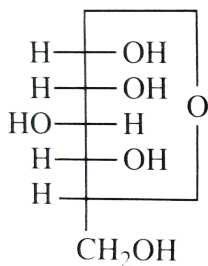
Answer: D



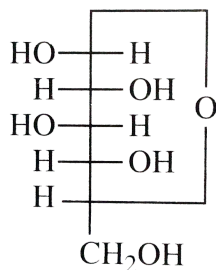
Watch Video Solution

15. Three cyclic structure of monosaccharides are given below.

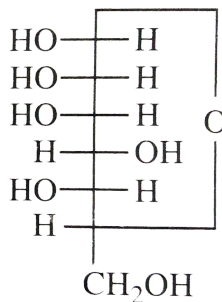
Which of these are anomers ?



(I)



(II)



(III)

A. I and II

B. II and III

C. I and III

D. III is anomer of I and II

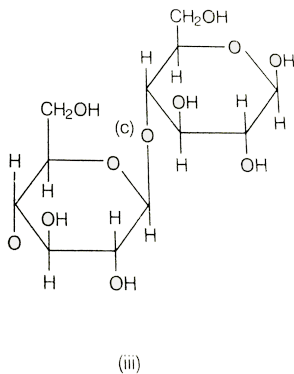
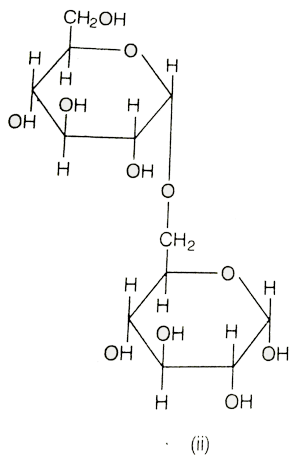
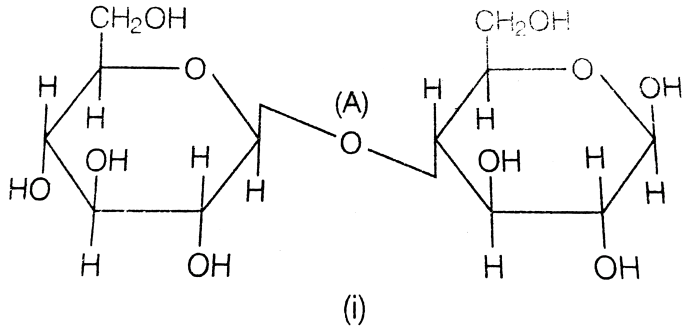
**Answer: A**



**Watch Video Solution**

**16.** Three structures are given below in which two glucose units are linked. Which of these linkages between glucose units are between  $C_1$  and  $C_4$  and which linkages are between  $C_1$  and  $C_6$  ?





A. (A) is between C-1 and C-4 , (B) and (C) are between C-1 and C-6

B. (A) and (B) are between C-1 and C-4 , (C) is between C-1 and C-6

C. (A) and (C) are between C-1 and C-4, (B) is between C-1 and C-6

D. (A) and (C) are between C-1 and C-6, (B) is between C-1 and C-4.

**Answer: C**

 [Watch Video Solution](#)

17. Optical rotations of some compounds along with their structures are given below. Which of them have D-configuration ?



A. I, II, III

B. II, III

C. I,II

D. III

**Answer: A**



[Watch Video Solution](#)

**18.** Which of the following reactions of glucose can be explained only by its cyclic structure?

A. Glucose forms pentaacetate

B. Glucose reacts with hydroxylamine to form an oxime.

C. Pentaacetate of glucose does not react with hydroxylamine

D. Glucose is oxidised by nitric acid to gluconic acid.

Answer: C



Watch Video Solution

## Exemplar Problems

1. Structure of a disaccharide formed by glucose and fructose is given below. Identify anomeric carbon atoms in monosaccharide units.



- A. 'a' carbon of glucose and 'a' carbon of fructose
- B. 'a' carbon of glucose and 'e' carbon of fructose
- C. 'a' carbon of glucose and 'b' carbon of fructose
- D. 'f' carbon of glucose and 'f' carbon of fructose.

**Answer: C**



**View Text Solution**

## Assertion And Reason

**1. Assertion :** Polysaccharides are called non-sugars.

**Reason :** Carbohydrates which yield a large number of monosaccharide units on hydrolysis are called polysaccharides.

- A. If both assertion and reason are true and reason is the correct explanation of assertion.
- B. If both assertion and reason are true but reason is not the correct explanation of assertion.
- C. If assertion is true but reason is false.

D. If both assertion and reason are false.

**Answer: B**

 [Watch Video Solution](#)

2. Assertion : Maltose and lactose are examples of reducing sugars.

Reason : Maltose and lactose reduce Fehling's solution and Tollens' reagent.

A. If both assertion and reason are true and reason is the correct explanation of assertion.

B. If both assertion and reason are true but reason is not the correct explanation of assertion.

C. If assertion is true but reason is false.

D. If both assertion and reason are false.

**Answer: A**

 [Watch Video Solution](#)

3. Assertion : Glucose gets oxidised to gluconic acid on reaction with mild oxidising agent like bromine water.

Reason : Glucose contains a keto group.

A. If both assertion and reason are true and reason is the correct explanation of assertion.

B. If both assertion and reason are true but reason is not the correct explanation of assertion.

C. If assertion is true but reason is false.

D. If both assertion and reason are false.

**Answer: C**

 [Watch Video Solution](#)

4. Assertion : Glucose is correctly named as D-(+)-glucose. ' 3

Reason : 'D' before the name of glucose represents its dextrorotatory nature.

A. If both assertion and reason are true and reason is the correct explanation of assertion.

B. If both assertion and reason are true but reason is not the correct explanation of assertion.

C. If assertion is true but reason is false.



D. If both assertion and reason are false.

**Answer: C**

 [Watch Video Solution](#)

5. Assertion : D-glucose is dextrorotatory whereas L-glucose is laevorotatory.

Reason : D-compounds are always dextro and L-compounds are always laevorotatory

A. If both assertion and reason are true and reason is the correct explanation of assertion.

B. If both assertion and reason are true but reason is not the correct explanation of assertion.

C. If assertion is true but reason is false.

D. If both assertion and reason are false.

**Answer: C**



**Watch Video Solution**

6. Assertion : Glucose reacts with phenyl hydrazine and Fehling's solution but not with  $NaHSO_3$ .

Reason:  $NaHSO_3$  cannot break the ring structure.

A. If both assertion and reason are true and reason is the correct explanation of assertion.

B. If both assertion and reason are true but reason is not the correct explanation of assertion.

C. If assertion is true but reason is false.

D. If both assertion and reason are false.

**Answer: D**

 [Watch Video Solution](#)

7. The two cyclic hemiacetal forms of glucose differing only in the configuration of the hydroxyl group at C-1 are called

- A. If both assertion and reason are true and reason is the correct explanation of assertion.
- B. If both assertion and reason are true but reason is not the correct explanation of assertion.
- C. If assertion is true but reason is false.
- D. If both assertion and reason are false.

**Answer: A**



**Watch Video Solution**

**8. Assertion:** Sucrose is a non reducing sugar.

**Reason :** Sucrose is a disaccharide formed by glycosidic linkage between C-1 of  $\alpha$ -glucose and C-2 of  $\beta$ -fructose.

- A. If both assertion and reason are true and reason is the correct explanation of assertion.
- B. If both assertion and reason are true but reason is not the correct explanation of assertion.
- C. If assertion is true but reason is false.
- D. If both assertion and reason are false.

**Answer: A**



**Watch Video Solution**

**9.** Assertion: Hydrolysis of sucrose brings about a change in sign of rotation from dextro to laevo.

Reason: Hydrolysis always changes the optical rotation of a compound.

- A. If both assertion and reason are true and reason is the correct explanation of assertion.
- B. If both assertion and reason are true but reason is not the correct explanation of assertion.
- C. If assertion is true but reason is false.
- D. If both assertion and reason are false.

**Answer: C**



**Watch Video Solution**

**10.** Assertion: All naturally occurring  $\alpha$ -amino acids are optically active

Reason: Most naturally occurring amino acids have D-configuration.

- A. If both assertion and reason are true and reason is the correct explanation of assertion.
- B. If both assertion and reason are true but reason is not the correct explanation of assertion.
- C. If assertion is true but reason is false.
- D. If both assertion and reason are false.

**Answer: D**



**Watch Video Solution**

**11. Assertion:** All enzymes found in cells are invariably proteins which catalyse biological reactions.

**Reason :** Enzymes act efficiently at a moderate temperature and pH.

- A. If both assertion and reason are true and reason is the correct explanation of assertion.
- B. If both assertion and reason are true but reason is not the correct explanation of assertion.
- C. If assertion is true but reason is false.
- D. If both assertion and reason are false.

**Answer: B**



**Watch Video Solution**

**12.** Assertion (A) In presence of enzyme, substrate molecule can be attacked by the reagent effectively.

Reason (R) Active sites of enzymes hold the substrate molecule in a suitable position.

- A. If both assertion and reason are true and reason is the correct explanation of assertion.
- B. If both assertion and reason are true but reason is not the correct explanation of assertion.
- C. If assertion is true but reason is false.
- D. If both assertion and reason are false.



**Answer: A**



**Watch Video Solution**

**13. Assertion:** Vitamin D cannot be stored in our body.

**Reason :** Vitamin D is fat soluble vitamin and is excreted out of the body with urine.

- A. If both assertion and reason are true and reason is the correct explanation of assertion.
- B. If both assertion and reason are true but reason is not the correct explanation of assertion.
- C. If assertion is true but reason is false.
- D. If both assertion and reason are false.

**Answer: D**



**Watch Video Solution**

**14.** Assertion: Purine bases present in DNA are adenine and guanine.

Reason: The base thymine is present in RNA while base uracil is present in DNA.

- A. If both assertion and reason are true and reason is the correct explanation of assertion.
- B. If both assertion and reason are true but reason is not the correct explanation of assertion.
- C. If assertion is true but reason is false.
- D. If both assertion and reason are false.

**Answer: C**



**Watch Video Solution**

**15. Assertion:** The two strands of DNA are complementary to each other

**Reason:** Adenine specifically forms hydrogen bonds with guanine whereas cytosine forms hydrogen bonds with thymine.

- A. If both assertion and reason are true and reason is the correct explanation of assertion.
- B. If both assertion and reason are true but reason is not the correct explanation of assertion.
- C. If assertion is true but reason is false.
- D. If both assertion and reason are false.

**Answer: C**



**Watch Video Solution**