



BIOLOGY

BOOKS - TRUEMAN BOOK COMPANY

BIOLOGY (HINGLISH)

**PLANT GROWTH AND DEVELOPMENT
AND PLANT MOVEMENTS**

Multiple Choice Questions

1. Abscisic acid is synthesized more abundantly in

A. Chloroplasts

B. Endoplasmic reticulum

C. Ribosomes

D. Peroxisomes

Answer: A



Watch Video Solution

2. The respiratory activity in "cell maturation" phase as compared to other phases is

A. equal

B. less

C. more

D. dependent upon temperature

Answer: B



Watch Video Solution

3. When growth is going on at a slow rate, this phase is known as

A. lag period

B. log period

C. period of diminishing growth

D. exponential phase

Answer: A



Watch Video Solution

4. Optimum growth occurs in

A. Blue light

B. Red light

C. White light

D. Green light

Answer: C



Watch Video Solution

5. Maximum rate of growth is achieved during

A. lag period

B. log period

C. steady state

D. senescent phase

Answer: B



Watch Video Solution

6. Cell differentiation is accompanied during period of

A. lag phase

B. log phase

C. diminishing growth

D. senescence

Answer: C



Watch Video Solution

7. The period of steady state is never reached
in the organs of

A. determinate structures

B. indeterminate structure

C. leaves

D. all the above

Answer: B



Watch Video Solution

8. When the rate of maximum growth is maintained for sometime, it is known as

A. J-shaped phase of growth

B. Linear phase of growth

C. S-shaped phase of growth

D. All the above

Answer: B



Watch Video Solution

9. Plants grow towards water, this phenomenon is called

A. phototropism

B. hydrotropism

C. hydrotactic movement

D. thigmotropism

Answer: B



Watch Video Solution

10. Movement of Sunflower towards the direction of Sun in

A. photonasty

B. phototropism

C. nyctinasty

D. seismonasty

Answer: B



Watch Video Solution

11. The seeds which are affected by the presence of light at the time of germination are known as

A. non photoblastic

B. photoblastic

C. light hard seeds

D. positively photoblastic

Answer: B



Watch Video Solution

12. The seeds of tomato can not germinate in the presence of light and hence are known as

A. negatively photoblastic

B. non photoblastic

C. photoblastic

D. light sensitive seeds

Answer: A



Watch Video Solution

13. The germination where hypocotyl grows actively bringing the seed above the soil is known as

A. epigeal

B. hypogeal

C. semi epigeal

D. vivipary

Answer: A



Watch Video Solution

14. The germination where epicotyl elongates and becomes curved keeping the cotyledons underground is known as

A. epigeal

B. hypogeal

C. semiepigeal

D. vivipary

Answer: B



Watch Video Solution

15. The process when the embryo of the seed continues growth while the latter is attached to the parent plant is known as

- A. epigeal germination
- B. hypogeal germination
- C. vivipary
- D. vernalisation

Answer: C



Watch Video Solution

16. Vivipary occurs in

- A. Rhizophora

B. Grasses

C. Bamboos

D. Hydrophytes

Answer: A



Watch Video Solution

17. Correct sequence of different phases of growth is

A. division - differentiation - elongation

B. division - elongation - differentiation

C. differentiation - division - elongation

D. elongation - differentiation - division

Answer: B



Watch Video Solution

18. For germination of seed, which light is necessary

Which wavelength of light is responsible for best flowering

A. Red

B. Green

C. Far red

D. Blue

Answer: A



Watch Video Solution

19. If the tip of seedling is cut off, growth as well as bending ceases because it hampers

A. respiration

B. photosynthesis

C. perception of light stimulus

D. transpiration

Answer: C



Watch Video Solution

20. A photoblastic seed is given following treatment. In which case germination of seeds will be maximum ?

(R = red light of $660\text{ m}\mu$ and Fr = far red light of $730\text{ m}\mu$)

A. Seeds + Fr

B. Seeds + R + Fr

C. Seeds + R + Fr + R

D. Seeds + R + Fr + R + Fr

Answer: C



Watch Video Solution

21. Growth hormones function

A. always as growth inhibitor

B. sometimes as growth promoters and
sometimes as growth inhibitors

C. always as growth promoters

D. rarely as growth promoters

Answer: B



Watch Video Solution

22. What is not true about auxin ?

- A. It is derived from mevalonic acid
- B. It promotes cell division
- C. It promotes stem elongation
- D. It inhibits lateral growth

Answer: A



Watch Video Solution

23. The universal natural auxin of plants is

A. IBA

B. IAA

C. NAA

D. Citric auxin

Answer: B



Watch Video Solution

24. Transport of auxins is

A. diffuse

B. always acropetal

C. polar

D. non polar

Answer: C



Watch Video Solution

25. Apical dominance is

A. suppression of growth of apical bud by
nearby lateral axillary buds

- B. stimulation of growth of apical bud by removal of nearby axillary buds
- C. suppression of growth of lateral axillary buds by removal of apical bud
- D. suppression of growth of nearby lateral axillary buds by apical bud

Answer: D



Watch Video Solution

26. Moving on a grass lawn facilitates better maintenance primarily owing to

A. wounding which stimulates rapid regeneration

B. removal of apical dominance and stimulation of lateral meristem

C. removal of apical dominance and promotion of cambial activity

D. none of the above

Answer: B



Watch Video Solution

27. Which of the following hormones is used in root formation on stem cutting?

A. Kinetin

B. GA

C. ABA

D. IBA

Answer: D



Watch Video Solution

28. Plants bend towards light because

- A. they need light for photosynthesis
- B. they need light for respiration
- C. cells on the shadow side elongate more
- D. light attracts them

Answer: C



Watch Video Solution

29. The phenomenon of apical dominance can be overcome by exogenous application of

A. ABA

B. gibberellins

C. cytokinins

D. ethylene

Answer: C



30. Which increases in the absence of light?

- A. Uptake of minerals
- B. Uptake of water
- C. Elongation of internodes
- D. Ascent of sap

Answer: C



31. The effect of IAA on the synthesis of ethylene is that it

A. is reduced

B. is induced

C. is unaffected

D. depends upon the presence of other hormones

Answer: B



Watch Video Solution

32. IAA was first isolated from

A. Corn germ oil

B. Gibberella

C. Human urine

D. Rhizopus

Answer: C



Watch Video Solution

33. Artificial application of auxins like IAA, IBA and NAA to unpollinated pistils can form

A. fruits with much flesh

B. larger fruits

C. sweet fruits

D. seedless fruits

Answer: D



Watch Video Solution

34. Who amongst the following is discoverer of auxin ?

A. Skoog

B. Went

C. Thimann

D. Lavrean

Answer: B



Watch Video Solution

35. _____ are sprayed on the cotton fields to defoliate and hence facilitate machine picking of bolls.

A. antiauxins

B. sodium salts of NAA

C. naphthalene acetic acid & related auxins

D. herbicides

Answer: A



Watch Video Solution

36. The nature of all gibberellins is

A. alkaline

B. neutral

C. acidic

D. buffer

Answer: C



Watch Video Solution

37. In a plant the concentration of gibberellins is highest in

- A. seeds and young leaves
- B. apical buds
- C. old leaves and flower buds
- D. all the above

Answer: A



Watch Video Solution

38. Dwarfness can be controlled by treating the plant with

- A. cytokinin
- B. gibberellic acid
- C. auxin
- D. antigibberellin

Answer: B



Watch Video Solution

39. Hormone that breaks dormancy of seeds/potato tuber is

A. IAA

B. ABA

C. Zeatin

D. Gibberellin

Answer: D



Watch Video Solution

40. The first cytokinin was isolated by

A. Darwin

B. Evins

C. Miller and Skoog

D. Leopold

Answer: C



Watch Video Solution

41. The first natural cytokinin of plants is

A. zeatin

B. kinetin

C. dihydroxyzeatin

D. riboxylzeatin

Answer: A



Watch Video Solution

42. Hormone primarily concern with cell division is

A. Ethylene

B. NAA

C. Cytokinin / zeatin

D. Gibberellic acid

Answer: C



Watch Video Solution

43. Morphogenesis is controlled by an interaction between

A. auxins and gibberellins

B. auxins and cytokinins

C. gibberellins and cytokinins

D. none of the above

Answer: B



Watch Video Solution

44. The phenomenon of delay of senescence by cytokinins is known as

A. Richmond Lang effect

B. Bohr effect

C. Kutyusky effect

D. Emerson effect

Answer: A



Watch Video Solution

45. The hormones which regulate phloem transport are

A. auxins

B. cytokinins

C. gibberellins

D. ethylene

Answer: B



Watch Video Solution

46. Cytokinin synthesis is maximum in

A. roots

B. leaves

C. shoot tip

D. fruit

Answer: A



Watch Video Solution

47. Name the hormone which stimulates transverse or isodiametric growth

A. ethylene

B. GA

C. sodium salt of NAA

D. methionine

Answer: A



Watch Video Solution

48. Major precursor of ethylene production in plants is

A. lysine

B. methionine

C. alanine

D. valine

Answer: B



Watch Video Solution

49. Match the items of column I and column II

Column I

Column II

a Auxin

p GA₃

b Cytokinin

r abscisic Acid

c Cytokinin

r abscisic Acid

d Dromin

s Acetic acid

t Zeatin

A. a - q, b - r, c - p, d - t

B. a - q, b - s, c - p, d - t

C. a - q, b - p, c - t, d - r

D. a-q, b- t, c-p, d- r

Answer: C



[Watch Video Solution](#)

50. Abscisic acid is mostly found in

- A. chloroplasts
- B. mitochondria
- C. ribosomes
- D. all organelles

Answer: A



[Watch Video Solution](#)

51. Which one of the following is a natural growth inhibitor ?

A. NAA

B. ABA

C. GA

D. Auxin

Answer: B



Watch Video Solution

52. Closure of stomata' is brought about by

A. Abscisic acid

B. Kinetin

C. Giberellin acid

D. IBA

Answer: A



Watch Video Solution

53. A natural growth regulator is

A. NAA

B. Ethylene

C. 2, 4-D

D. Benzaldehyd

Answer: B



Watch Video Solution

54. Abscisic acid controls/ promotes

A. cell division

B. leaf fall, senescence and dormancy

C. shoot elongation

D. cell elongation and wall formation

Answer: B



Watch Video Solution

55. Who first suggested presence of growth regulatory chemicals in plants ?

A. Darwin

B. Went

C. Sachs

D. Paal

Answer: A



Watch Video Solution

56. Banana is natural parthenocarpic fruit due to

A. Triploid nature

B. vegetative propagation

C. high level of auxins in ovary

D. treatment with certain phytohormones

Answer: C



Watch Video Solution

57. Low concentraion of auxin inhibits growth

in

A. roots

B. leaves

C. stem

D. flower bud

Answer: A



Watch Video Solution

58. To secure a good crop of tea leaves from a single healthy plant, the grower should

A. spray auxins

B. supply auxins to soil

C. remove the apical bud of main shoot
and branches

D. cut off the lateral of plant and apply
auxin branches

Answer: C



Watch Video Solution

59. A hormone used to induce root formation in horticulture

A. IBA

B. GA

C. ABA

D. 2, 4-D

Answer: A



Watch Video Solution

60. In plants auxin synthesis. with high concentration occurs in

A. cortex of leaves

B. phloem cells

C. shoot tip

D. root tip

Answer: C



Watch Video Solution

61. Homones are translocated through

A. xylem

B. phloem

C. pith

D. rays

Answer: B



Watch Video Solution

62. The rosette habit of cabbage can be changed by application of

A. GA

B. NAA

C. AbA

D. Cytokinins

Answer: A



Watch Video Solution

63. Dwarf plants can be obtained with the help of

A. IAA

B. auxins

C. antigibberellins

D. cytokinins

Answer: C



Watch Video Solution

64. Hormone similar to animal steroidal hormone is

A. auxin

B. gibberellin

C. ethylene

D. Cytokinin

Answer: B



Watch Video Solution

65. A hormone which can substitute effect of cold treatment and photoperiodism to bring early flowering is

A. ethylene

B. gibberellin

C. cytokinin

D. florigen

Answer: B



Watch Video Solution

66. Which of the following phytohormones replaces female flowers with female flowers on monoecious plants of cucurbits ?

A. IAA

B. Cytokinins

C. GA's

D. ABA

Answer: C



Watch Video Solution

67. Which hormones help in breaking the dormancy of seed ?

(a) ABA

(b) CK

(c) GA

(d) Ethylene

A. a, C, b

B. a, b, d

C. b, c, d

D. a, b, c

Answer: C



Watch Video Solution

68. Bakanae disease in Japan was due to a fungus known as

A. *Gibberella fujikuroi*

B. *Aspergillus flavus*

C. Both (1) and (2)

D. *Plasmopara viticola*

Answer: A



Watch Video Solution

69. From which was zeatin isolated ?

A. Coconut milk

B. Pineapple

C. Soyabean

D. Groundnut

Answer: A



Watch Video Solution

70. Which of the following type of phytohormones resemble the nucleic acids in some structural aspects

A. Cytokinins

B. Auxins

C. Gibberellins

D. Absasic acid

Answer: A



Watch Video Solution

71. Male hormone in plant is

- A. auxin (IAA)
- B. gibberellin (GA)
- C. cytokinin (CK)
- D. ethylene

Answer: B



Watch Video Solution

72. Which of the following is indispensable in all culture

A. Gibberellin (GA_3)

B. Cytokinin

C. Ethylene

D. ABA

Answer: B



Watch Video Solution

73. Climacteric fruit is the one which shows

A. autochory

B. persistent flower parts

C. high respiratory rate and ethylene at ripening

D. both (2) and (3)

Answer: C



Watch Video Solution

74. Phytochrome which is a photoreceptor for photoperiodic induction can be extracted from

A. growing bud

B. cotyledons

C. leaves

D. stem

Answer: C



Watch Video Solution

75. Phytochrome is found in

- A. algae/thallophytes
- B. vascular cryptogams
- C. fungi
- D. angiosperms

Answer: D



Watch Video Solution

76. Chrysanthemum is a

A. short day plant

B. long day plant

C. day neutral plant

D. short long day plant

Answer: A



Watch Video Solution

77. The plants requiring short photoperiods for floral initiation and long photoperiods for blossoming are known as

A. long day plants

B. short day plants

C. short long day plants

D. long short day plants

Answer: C



Watch Video Solution

78. In many plants the change over from vegetative to reproductive phase takes place in response to

A. the length of the day

B. the severity of temperature

C. mainly the food material available in soil

D. the oxygen present in the air

Answer: A



Watch Video Solution

79. Sugarcane is

A. amphiphotoperiodic plant

B. intermediate plant

C. day neutral plant

D. short day plant

Answer: D



Watch Video Solution

80. The period between summer and autumn is favourable to

A. short long day plants

B. long short day plants

C. day neutral plants

D. amphiphotoperiodic plants

Answer: B



Watch Video Solution

81. The period between spring and summer is favourable to

A. short long day plants

B. long short day plants

C. day neutral plants

D. amphiphotoperiodic plants

Answer: A



Watch Video Solution

82. Flowering in short day plants is induced by

A. photoperiod less than 12 hours

B. photoperiod below a critical length

C. long night

D. long day

Answer: B



Watch Video Solution

83. Which wavelengths are the most effective in photoperiodism ?

A. blue and red

B. red and far red

C. green

D. orange and red

Answer: D



Watch Video Solution

84. Light break reaction means

A. influence of short periods of dark in the
light period

B. influence of short periods of light in the
dark periods

C. influence of GA_3 on light periods

D. production of some inhibitors during
light periods

Answer: B



Watch Video Solution

85. A chemical believed to be involved in flowering is

A. ethylene

B. cytochrome

C. florigen

D. 2, 4-D

Answer: C



Watch Video Solution

86. Vernalisation is

A. growth curve related to light

B. effect of photoperiods of plant growth

C. speeding up ability to flower by low
temperature treatment

D. diurnal photoperiodicity

Answer: C



Watch Video Solution

87. The stimulus of cold treatment (vernalisation) is perceived by

A. fruits

B. shoot apex

C. axillary buds

D. flowers

Answer: B



Watch Video Solution

88. Low temperature required for vernalization is usually between

A. $1^{\circ} - 10^{\circ} C$

B. $5 - 15^{\circ} C$

C. $1 - 30^{\circ} C$

D. $10 - 3^{\circ} C$

Answer: A



Watch Video Solution

89. Vernalisation can often be replaced by

A. auxin

B. cytokinins

C. gibberellins

D. ethylene

Answer: C



Watch Video Solution

90. Phytochrome is mainly involved in picking stimulus in

- A. phototropism
- B. photorespiration
- C. photoperiodism
- D. photosynthesis

Answer: C



Watch Video Solution

91. P_{tr} interconversion is regulated by

A. AbA

B. 2, 4-D

C. IAA

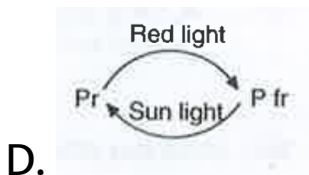
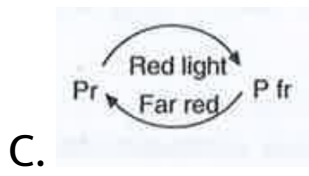
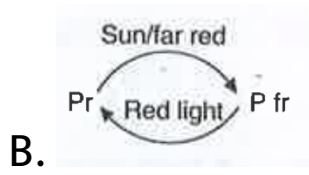
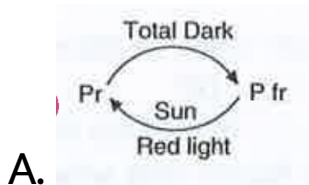
D. GA

Answer: D



View Text Solution

92. Which of the following is correct for phytochrome conversion reaction



Answer: C



93. If the requisite period of low temperature treatment is followed by a period of high temperature, the expected acceleration of flowering did not occur. This process is known as

- A. photophosphorylation
- B. dedifferentiation
- C. devernalization

D. vernalization

Answer: C



Watch Video Solution

94. If night period is broken by a single flash of red light, followed by far red, red and finally far red light, what will be its effect on flowering in short day plants

A. no flowering

B. poor flowering

C. delayed flowering

D. no effect on flowering in SDP

Answer: D



Watch Video Solution

95. If a tree flowers thrice in a year (October, January and July) in northern India, it is said to be

A. photo-and thermosensitive

B. photo- and thermo insensitive

C. photo-sensitive and thermoinsensitive

D. thermosensitive and photoinsensitive

Answer: B



Watch Video Solution

96. florigen is synthesised in

A. leaves

B. fruit

C. stem

D. root

Answer: A



Watch Video Solution

97. Flash of light in dark inhibits flowering in

A. SDP

B. LDP

C. IP

D. DNP

Answer: A



Watch Video Solution

98. In SDP, flowering is interrupted if

A. dark condition is interrupted by white/
red light

B. dark condition is interrupted by far red light

C. dark condition is interrupted by red followed by far red light

D. in short day plant flowering can not be interrupted

Answer: A



Watch Video Solution

99. In short plants (SDP) flowering is induced by

A. short day and interrupted long night

B. short night

C. long day and interrupted night

D. none

Answer: D



Watch Video Solution

100. Maryland mammoth variety of tobacco is

a

A. SDP

B. LDP

C. DNP

D. Short-long day plant

Answer: A



Watch Video Solution

101. A long day plant flowers only when it is exposed to

- A. Red light
- B. Light more than critical day length
- C. Light equal to critical day length
- D. Light less than critical day length

Answer: B



Watch Video Solution

102. Senescence of leaves can be delayed and shelf life of fruits can be increased by the spray of

- A. Cytokinins
- B. Gibberellins
- C. auxins and Ethylene
- D. ABA

Answer: A



Watch Video Solution

103. Common inhibitor of germination is

A. vernalin

B. pantothenic acid

C. GA

D. ABA

Answer: D



Watch Video Solution

104. Differentiation of shoot is promoted by

A. high auxin : cytokinin ratio

B. high cytokinin : auxin ratio

C. high gibberellin : auxin ratio

D. high gibberellin : cytokinin ratio

Answer: B



Watch Video Solution

105. Coconut milk contains:

A. abiscisic acid

B. auxin

C. cytokinin

D. gibberellin

Answer: C



Watch Video Solution

106. Size of grapes increases in application of

A. gibberellins

B. cytokinin

C. auxin

D. all the above

Answer: A



Watch Video Solution

107. Pruning of plants promotes branching because the axillary buds get sensitized to

A. ethylene

B. gibberellin

C. cytokinin

D. in dole acetic acid

Answer: C



Watch Video Solution

108. One set of a plant was grown at 12 hours day and 12 hours night period cycle and it flowered while in the other set night period cycles and it flowered while in the other set night phase was interrupted by flash of lighth

and did not produce flower. Under which one of the following categories will you place this plant

A. Darkness neutral

B. Day neutral

C. Short day

D. Long day

Answer: C



Watch Video Solution

109. Leaf fall occurs in a tree when there is increase in concentration of

A. abscissic acid

B. auxin

C. gibberellins

D. cytokinins

Answer: A



Watch Video Solution

110. Gibberellins can promote seed germination because of their influence on

A. rate of cell division

B. production of hydrolyzing enzymes

C. synthesis of abscisic acid

D. absorption of water through hard seed coat

Answer: B



Watch Video Solution

111. Touch me not belongs to

- A. Papilionaceae
- B. Caesalpinioideae
- C. Mimosoideae
- D. Solanaceae

Answer: C



Watch Video Solution

112. Tendrils exhibit/twining of tendrils is due to

A. thigmotropism

B. seismonasty

C. heliotropism

D. diageotropism

Answer: A



Watch Video Solution

113. Plants normally flowering in winter remain vegetative in summer even if they are kept at winter temperature because

A. Transpiration rate becomes very high during summer

B. Laws of limiting factors are applicable in summer

C. Pollination fails to take place in summer

D. They do not get the required day length during summer

Answer: D



Watch Video Solution

114. Which of the following statements are correct?

1. Gibberellins can substitute light treatment
2. Gibberellins increase the yield of malt from barley grains in the brewing industry
3. Gibberellins favour flowering in long day plants
4. Gibberellins induce flowering in short day

plants

Select the correct answer using the codes given below

A. 1, 2, 3 and 4

B. 2 and 4

C. 1, 3 and 4

D. 1, 2 and 3

Answer: D



Watch Video Solution

115. The shoot branching depends upon the development of axillary buds but many of the buds in axillary position never grow out due to the

A. Inhibitory factor present in the axillary bud

B. Inhibitory factor present in the apical bud

C. Inhibition under genetic control

D. None of the above

Answer: B



Watch Video Solution

116. Consider the following statements

1. In climacteric fruits, ethylene production is high.
2. Gibberellin present in a healthy stem causes some of the new cells to differentiate as phloem.
3. Loss of turgor in leaves stimulates the production of abscisic acid.

Which of the statements given above are correct?

A. 1 and 2 only

B. 2 and 3 only

C. 1 and 3 only

D. 1, 2 and 3

Answer: C



Watch Video Solution

117. Which one does not exhibit seed dormancy ?

A. Rhizophora

B. Xanthium

C. Phaseolus

D. Cassia

Answer: A



Watch Video Solution

118. Which of the following plant hormones is correctly matched with its function

- A. Abscisic acid-promotes seed dormancy
- B. Gibberellic acid-promotes fruit ripening
- C. Auxin-promotes leaf senescence
- D. Cytokinin-promotes seed dormancy

Answer: A



Watch Video Solution

119. A long day plant with critical day length of 14 hrs will flower under which of the following treatments?

A. 7 hrs light-2 hrs darkness-3 hrs light-5 hrs darkness-7 hrs light

B. 5 hrs light-9 hrs darkness-a hrs light-2 hrs darkness

C. 11 hrs darkness-13 hrs light

D. 6 hrs light-6 hrs darkness-7 .5 hrs light- 4.5 hrs darkness

Answer: A



Watch Video Solution

120. Go through the following matches

(i) Auxins - Tryptophan

(ii) Ethylene - Mevalonic acid

(iii) Gibberellins - Methionine

(iv) Cytokinin - Aminopurines

Which of these are correct

A. (i),(ii) & (iii)

B. (i) & (iv)

C. (ii),(iii) & (iv)

D. (i) & (iii)

Answer: B



Watch Video Solution

121. Read the following matches

(i) Auxins - Promotes abscission of older mature leaves and fruits

(ii) Gibberellins - Stimulation of internodal

growth

(iii) Abscisic acid - Stops cambial activity

(iv) Ethylene-Induces seed & bud dormancy

Which of these are correct

A. (ii) & (iii)

B. (i), (iii) & (iv)

C. (i), (ii) & (iii)

D. All are correct

Answer: C



Watch Video Solution

122. Go through the following matches

(i) Cytokinin- Inhibits secondary cambial growth

(ii) Ethylene - Prevents senescence

(iii) Abscisic acid- Stops cambial activity

(iv) Ethylene -Induces seed & bud dormancy

Which of these are correct

A. (i)&(iii)

B. (i),(iii)& (iv)

C. (iii) & (iv)

D. All are correct

Answer: A



Watch Video Solution

123. Go through the following statements

(i) The most widely used compound as source of ethylene is ethephon.

(ii) Ethylene helps the plants to increa their absorption surface by promotin root growth and root hair formation.

(iii) 2, 4 - D is mainly used to kill mature monocotyledonous plants.

(iv) Spraying juvenile conifers with GAs hastens the maturity period, thus leading to early seed production.

Which of these are correct

A. (i) & (iv)

B. (i), (ii) & (iv)

C. (i), (iii) & (iv)

D. (ii), (iii) & (iv)

Answer: B



Watch Video Solution

124. Go through the following matches

(i) Abscisic acid - Delays senescence

(ii) Auxins - Control xylem

(iii) Gibberellins - Cause fruits like apple to elongate and improve its shape

(iv) Cytokinins - Promotes apical dominance caused by auxins

Which of these are correct :

A. (ii) & (iii)

B. (ii),(iii) & (iv)

C. (i),(iii) & (iv)

D. (ii),(iii) & (iv)

Answer: A



Watch Video Solution

125. Go through the following statements

(i) In geometric growth, following mitotic cell division, only one daughter cell continues to divide while the other differentiates and

mature.

(ii) The ability of plants to follow different pathways in response to environment or phases of life to form different kinds of structures, is called plasticity.

(iii) The mathematical expression for arithmetic growth is $Lt = L_0 + rt$ while for geometric growth, it is $W_1 = W_0 = W_0 e^{rt}$

(iv) The form of growth wherein new cells are always being added to the plant body by the activity of the meristem, is called the open form of growth.

Which of these are correct .

A. (iii) & (iv)

B. (ii), (iii) & (iv)

C. (ii) & (iv)

D. All are correct

Answer: B



Watch Video Solution

126. Which one of the following statements is not correct regarding vivipary?

- A. Seeds germinate within the fruit while still attached to the mother plant
- B. It usually occurs under highly saline conditions
- C. It occurs in the mangrove plants
- D. It involves a dormancy period for the seed

Answer: D



Watch Video Solution

127. Which of the following is a correct statement regarding the plant growth ?

- A. Growth does not involve increase in number of parts
- B. Growth occurs during definite periods
- C. Well defined growing regions are absent
- D. It is generally indeterminate

Answer: D



Watch Video Solution

128. Photoperiodism is associated with the formation of

A. auxin

B. florigen

C. vernalin

D. gibberellin

Answer: B



Watch Video Solution

129. The wavelength of light absorbed by Pr form of phytochrome is

A. 720nm

B. 620nm

C. 640nm

D. 680nm

Answer: D



Watch Video Solution

130. Which one of the following pairs, is not correctly matched ?

- A. Cytokinin - Cell division
- B. IAA - Cell wall elongation
- C. Abscissic Acid - Stomata! closure
- D. Gibberellic Acid - Leaf fall

Answer: D



Watch Video Solution

131. Foolish Seedling disease of rice led to the discovery of

A. 2, 4-D

B. IAA

C. GA

D. ABA

Answer: C



Watch Video Solution

132. One of the synthetic auxin is

A. GA

B. IBA

C. NAA

D. IAA

Answer: C



Watch Video Solution

133. Cytokinins which have specific effect in cytokinesis are modified forms of

A. Cytosln

B. Adenine

C. Guanine

D. Thiamine

Answer: B



Watch Video Solution

134. Photoperiodism was first characterized in

A. Cotton

B. Tobacco

C. Potato

D. Tomato

Answer: B



Watch Video Solution

135. Coiling of garden pea tendrils around any support is an example of

- A. Thermotaxis
- B. Thigmotaxis
- C. Thigmonasty
- D. Thigmotropism

Answer: D



Watch Video Solution

136. Phototropic curvature is result of uneven distribution of

A. Auxin

B. Gibberellin

C. Phytochrome

D. Cytokinins

Answer: A



Watch Video Solution

137. Transport of cytokinin in the plant body is

A. Basipetal

B. Lateral

C. Acropetal

D. On all sides

Answer: C



Watch Video Solution

138. Bolting hormone is

A. gibberellin

B. ABA

C. auxin

D. cytokinin

Answer: A



Watch Video Solution

139. Auxanometer is used to measure plant organ

- A. the growth in length of a plant organ
- B. the growth in breadth of a plant organ
- C. population of the pests attacking a plant
- D. all of the above

Answer: A



Watch Video Solution

140. Which one of the following generally acts as an antagonist to gibberellins

A. ABA

B. IAA

C. Zeatin

D. Ethylene

Answer: A



Watch Video Solution

141. Through their effect on plant growth regulators, what do the temperature and light control in the plants

A. Closure of stomata

B. Fruit elongation

C. Apical dominance

D. Flowering

Answer: D



Watch Video Solution

142. Apical dominance is caused by

A. Auxins

B. Gibberellins

C. Cytokinins

D. Abscissic acid

Answer: A



Watch Video Solution

143. The natural plant hormone isolated from corn kernels and coconut milk is

A. Florigen

B. GA_3

C. Auxins

D. Zeatin

Answer: D



Watch Video Solution

144. Low temperature treatment to speed up the process of flowering is referred to as

- A. Vernalization
- B. Cryobiology
- C. Photoperiodism
- D. Pruning

Answer: A



Watch Video Solution

145. During seed germination, its stored food is mobilised by

A. ABA

B. Gibberellin

C. Ethylene

D. Cytokinin

Answer: B



Watch Video Solution

146. Which one of the following plant hormone (phytomone) is known as a stress hormone

A. Indole acetic acid

B. Abscissic acid

C. Ethylene

D. GA_3

Answer: B



Watch Video Solution

147. A few normal seedlingd of tomato were kept in a dark room. After a few days were found to have become white coloured like albinos. Ehich of the following terms will you use to describe them

A. Defoliated

B. Mutated

C. Embolised

D. Etiolated

Answer: D



Watch Video Solution

148. Dr. F. Went noted that if coleoptile tips were removed and placed on agar for one hour, the agar would produce a bending when placed on one side of freshly cut coleoptile stumps. Of what significance is this experiment

A. It demonstrated polar movement of auxins.

B. It made possible the isolation and exact identification of auxin.

C. It is the basis for quantitative determination of small amounts of growth promoting substances

D. It supports the hypothesis that IAA is auxin

Answer: A



Watch Video Solution

149. Minerals known to be required in large amounts for plant growth include

A. calcium, magnesium, manganese, copper

B. potassium, phosphorus, selenium, boron

C. magnesium, sulphur, iron, zinc

D. phosphorus , potassium, sulphur, calcium

Answer: D



Watch Video Solution

150. The rate of growth of any organism follows

Or

Typical growth curve in plants is

A. linear

B. stair-steps shaped

C. parabolic

D. sigmoid

Answer: D



Watch Video Solution

151. What causes a green plant exposed to the light on only one side, to bend toward the source of light as it grows

A. Green plants seek light because they are phototropic

- B. Light stimulates plant cells on the light-
ed side to grow faster
- C. Auxin accumulates on the shaded side,
stimulating greater cell elongation there
- D. Green plants need light to perform pho-
tosynthesis

Answer: C



Watch Video Solution

152. Auxin can be bioassayed by

A. avena coleoptile curvature

B. hydroponics

C. potometer

D. lettuce hypocotyl elongation

Answer: A



Watch Video Solution

153. The Avena curvature is used for bioassay of

A. GA_3

B. IAA

C. Ethylene

D. ABA

Answer: B



Watch Video Solution

154. You are given a tissue with its potential for differentiation in an artificial culture .Which of the following pairs of hormones would you add to the medium to secure shoots as well as roots

A. IAA and gibberemn

B. Auxin and cytokinin

C. Auxin and abscisic acid

D. Gibberellin and abscisic acid

Answer: B





Watch Video Solution

155. Phytochrome is

- A. Flavoprotein
- B. Glycoprotein
- C. Lipoprotein
- D. Chromoprotein

Answer: D



Watch Video Solution

156. study the four statements (A-D) given below and select the two correct ones out of them

(A) Definition of biological species was given by Ernst Mayr

(B) photoperiod does not affect reproduction in plants

(C) Binomial nomenclature system was given by Ernst Whittaker

(D) In unicellular organisms, reproduction is synonymous with growth

The two correct statements are

A. (ii) and (iii)

B. (iii) and (iv)

C. (i) and (iv)

D. (i) and (ii)

Answer: C



Watch Video Solution

157. Which of the following prevents falling of fruits

OR

Fruit and leaf drop at early stages can be prevented by the application

A. Cytokinins

B. Ethylene

C. Auxins

D. Gibberellic acid

Answer: C



Watch Video Solution