



MATHS

NCERT - NCERT

MATHEMATICS(GUJRATI ENGLISH)

STATISTICS

Example

1. The relative humidity (in %) of a certain City for a September month of 30 days was as

follows:

98.1	98.6	99.2	90.3	86.5	95.3	92.9	96.3	94.2	95.1
89.2	92.3	97.1	93.5	92.7	95.1	97.2	93.3	95.2	97.3
96.0	92.1	84.9	90.0	95.7	98.3	97.3	96.1	92.1	89

- (i) Construct a grouped frequency distribution table with classes 84-86, 86,-88 etc.
- (ii) What is the range of the data?



Watch Video Solution

2. Rain fall of a place in the week is 4 cm, 5 cm, 12cm, 3cm, 6cm, 8cm, 0.5cm. Find the average rainfall per day.

A. 5 cm

B. 5.5 cm

C. 6 cm

D. 4.9 cm

Answer: 5.5 cm



Watch Video Solution

3. If the mean of 12, 13, x , 17, 18 and 20 is 16, then $x = \dots\dots\dots$



 [Watch Video Solution](#)

4. find the mean of the following data.

x	5	10	15	20	25
f	3	10	25	7	5



[Watch Video Solution](#)

5. If the mean of the following data is 7.5, then find the value of 'A'.

Marks	5	6	7	8	9	10
No. of Students	3	10	17	A	8	4

A. 15

B. 17

C. 18

D. 20

Answer: 18



Watch Video Solution

6. find the arithmetic mean of the following data.

x	10	12	14	16	18	20	22
f	4	5	8	10	7	4	2

A. 15

B. 16

C. 14.9

D. 15.55

Answer: 15.55



Watch Video Solution

7. Find the mode of the following marks (out of 10) obtained by 20 students : 4, 6, 5, 9, 3, 2, 7, 7, 6, 5, 4, 9, 10, 10, 3, 4, 7, 6, 9, 9



[Watch Video Solution](#)

8. Test scores out of 100 for a class of 20 students are as follows:

93, 84, 97, 98, 100, 78, 86, 100, 85, 92, 55, 91, 90, 75, 94, 93, 60, 81, 95

(a) Make a frequency table taking class interval

as 91-100, 81-90, ...

(b) Find the modal class (The "Modal class" is the class containing the greatest frequency).

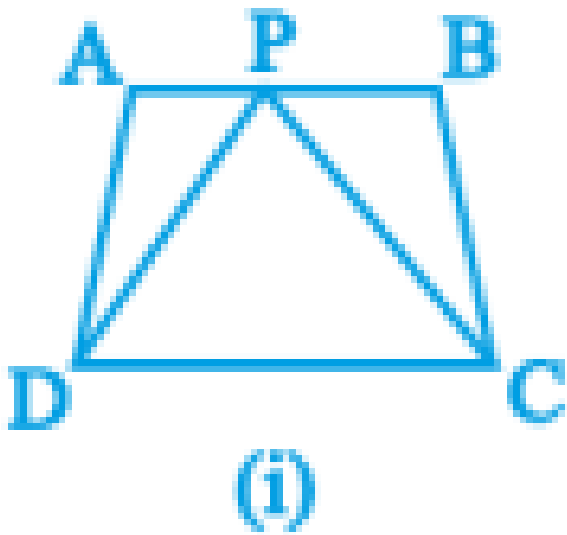
(c) find the interval that contains the median.



[Watch Video Solution](#)

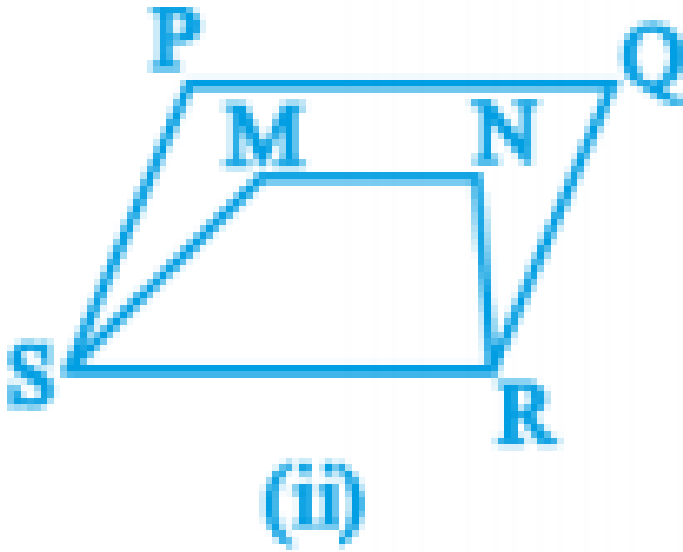
Exercise 9 1

1. Write the mark wise frequencies in the following frequency distribution table.



[Watch Video Solution](#)

2. The blood group of 36 students of IX class are recorded as follows

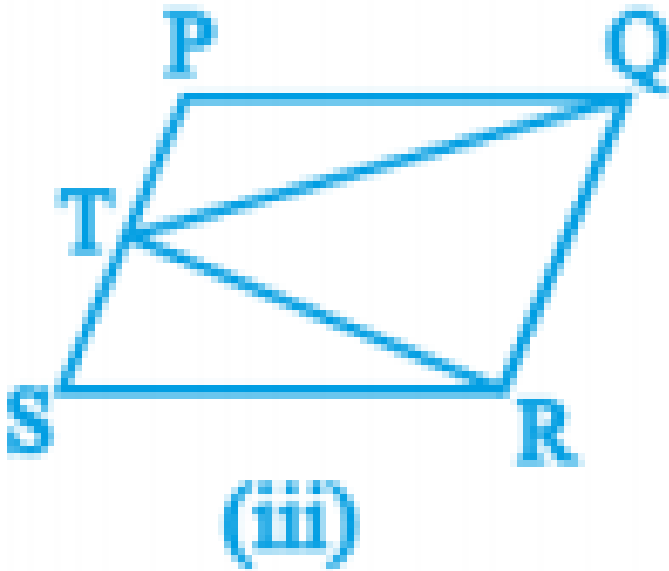


Represent the data in the form of frequency distribution table. Which is the most common and which is the rarest blood group among these students?



Watch Video Solution

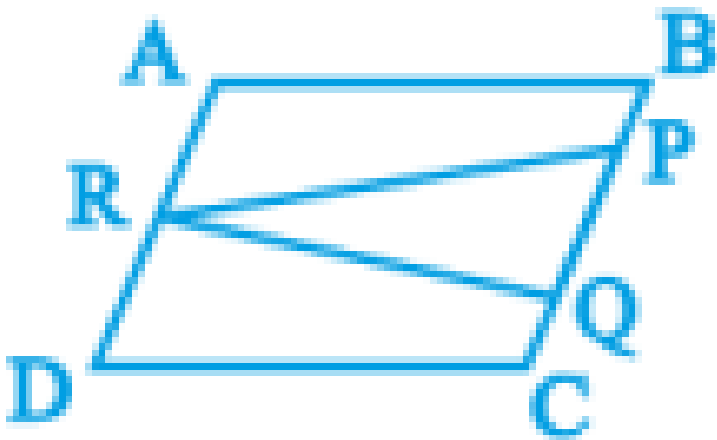
3. Three coins are tossed 30 times simultaneously. Each time the number of heads occurring was noted down as follows:



Prepare a frequency distribution table for the data given above.

 [Watch Video Solution](#)

4. A TV channel or organised SMS (Short Message Service) poll on prohibition on smoking giving options like A- complete prohibition, B- prohibited in public places only, C- not necessary, SMS results in one hour were



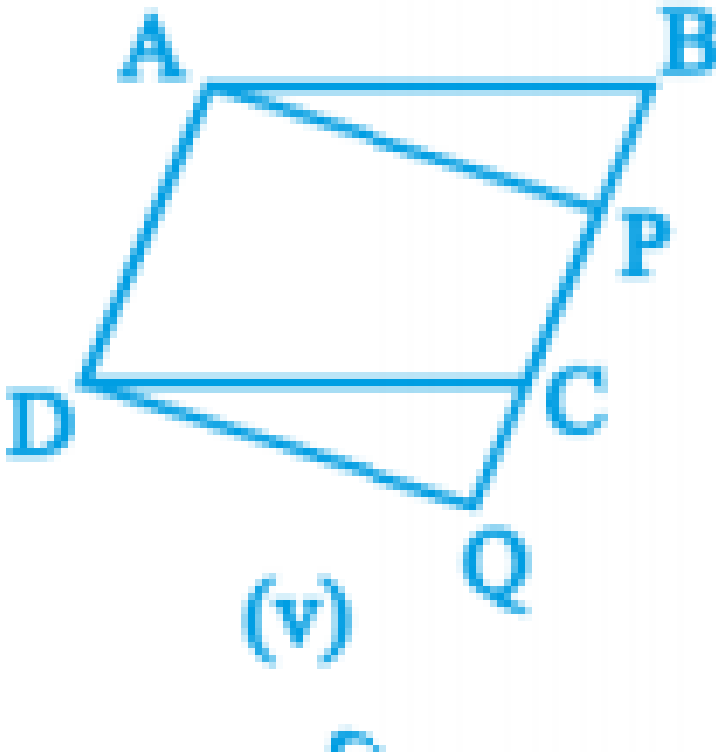
(iv)

Represent the amount of data is grouped frequency distribution table. How many appropriate answers were received? What was the majority of peoples' opinion?



[Watch Video Solution](#)

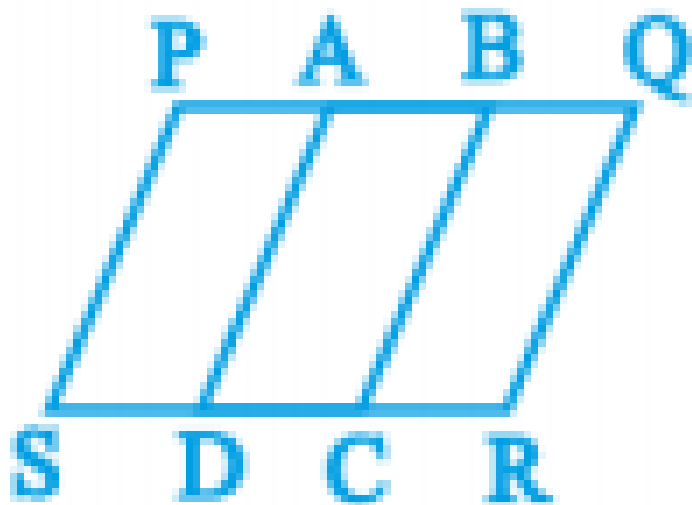
5. Represent the data in the adjacent bar graph as frequency distribution table.



 [Watch Video Solution](#)

6. Identify the scale used on the axes of the adjacent graph. Write the frequency

distribution from it.



(vi)



[Watch Video Solution](#)

7. The marks of 30 students of a class of 10 in a test (out of 75) are given below

40, 21, 50, 37, 42, 37, 38, 42, 49, 52, 38, 53, 57, 47,
29,

59, 61, 33, 17, 17, 39, 44, 42, 39, 14, 7, 27, 19, 54, 51.

Form a frequency table with equal class intervals.



[Watch Video Solution](#)

8. The electricity bills (in rupees) of 25 houses in a locality are given below. Construct a grouped frequency distribution table with a class size of 75.

170, 212, 252, 225, 310, 712, 412, 425, 322, 325,
192, 198, 230, 320, 412,
530, 602, 724, 370, 402, 317, 403, 405, 372, 413



[Watch Video Solution](#)

9. A company manufactures car batteries of particular type. The life (in years) of 40 batteries was recorded as follows:

2.6	3.0	3.7	3.2	2.2	4.1	3.5	4.5
3.5	2.3	3.2	3.4	3.8	3.2	4.6	3.7
2.5	4.4	3.4	3.3	2.9	3.0	4.3	2.8
3.5	3.2	3.9	3.2	3.2	3.1	3.7	3.4
4.6	3.8	3.2	2.6	3.5	4.2	2.9	3.6

Construct a grouped frequency distribution

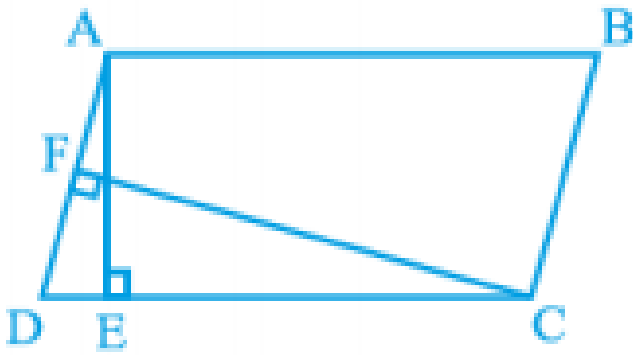
table with exclusive classes for this data, using class intervals of size 0.5 starting from the interval 2-2.5.



[Watch Video Solution](#)

Exercise 9 2

1. Weights of parcels in a transport office are given below.



आकृति 9.15

Find the mean weight of the parcels.



[Watch Video Solution](#)

2. Number of families in a village in correspondence with the number of children are given below:

No of children	0	1	2	3	4	5
No of families	11	25	32	10	5	1

Find the mean number of children per family.



Watch Video Solution

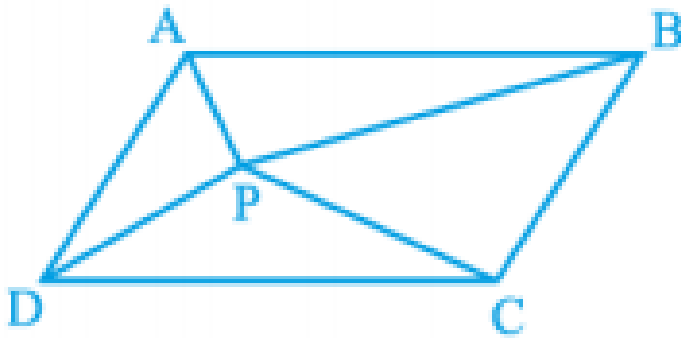
3. If the mean of the following frequency distribution is 7.2 find value of 'K'.

x	2	4	6	8	10	12
f	4	7	10	16	K	3



Watch Video Solution

4. Number of villages with respect to their population as per India census 2011 are given below.



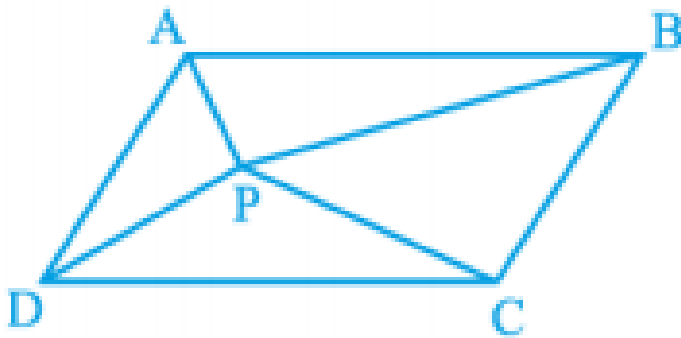
आकृति 9.16

Find the average population in each village.



[Watch Video Solution](#)

5. AFLATOUN social and financial educational program initiated savings program among the high school children in Hyderabad district. Mandal wise savings in a month are given in the following table



आकृति 9.16

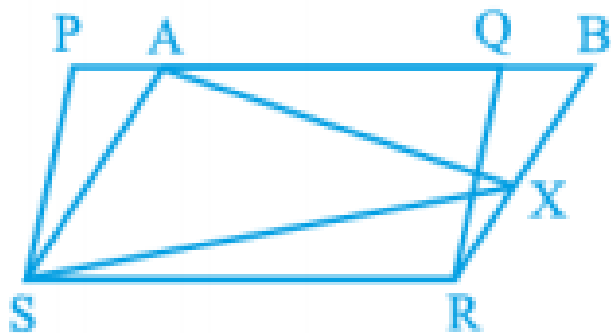
Find arithmetic mean of school wise savings in

each mandal. Also find the arithmetic mean of saving of all schools.



[Watch Video Solution](#)

6. The heights of boys and girls of IX class of a school are given below.



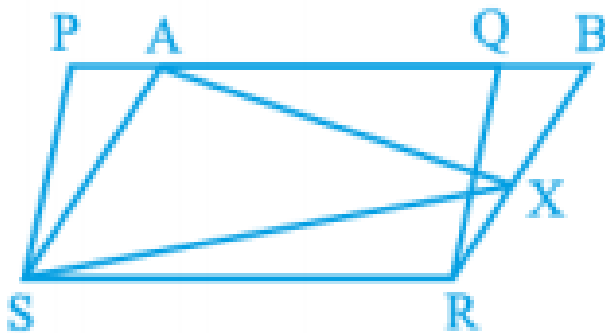
आकृति 9.17

Compare the heights of the boys and girls.



Watch Video Solution

7. Centuries scored and number of cricketers in the world are given below.



आकृति 9.17

Find the mean, median and mode of the given data.



Watch Video Solution

8. On the occasion of New year's day a sweet stall prepared sweet packets. Number of sweet packets and cost of each packet are given as follows.

Cost of packet (in ₹)	₹25	₹50	₹75	₹100	₹125	₹150
No of packets	20	36	32	29	22	11

Find the mean, median and mode of the data.



[Watch Video Solution](#)

9. The mean (average) weight of three students is 40 kg. One of the students Ranga weighs 46 kg. The other two students, Rahim and Reshma have the same weight. Find Rahim's weight.



[Watch Video Solution](#)

10. The donations given to an orphanage home by the students of different classes of a secondary school are given below.

Class	Donation by each student (in ₹)	No. of students donated
VI	5	15
VII	7	15
VIII	10	20
IX	15	16
X	20	14

Find the mean, median and mode of the data.



[Watch Video Solution](#)

11. There are four unknown numbers. The mean of the first two numbers is 4 and the mean of the first three is 9. The mean of all four number is 15, if one of the four number is 2 find the other numbers.



[Watch Video Solution](#)

Try These

1. Which of the following are primaryt and secondary data ?

(i) Collection of the data about enrollment of students in your school for a period from 2001 to 2010.

(ii) Height of students in your class recorded by physical education teacher.



[Watch Video Solution](#)

2. Find the median of the scores 75, 21, 56, 36, 81, 05, 42



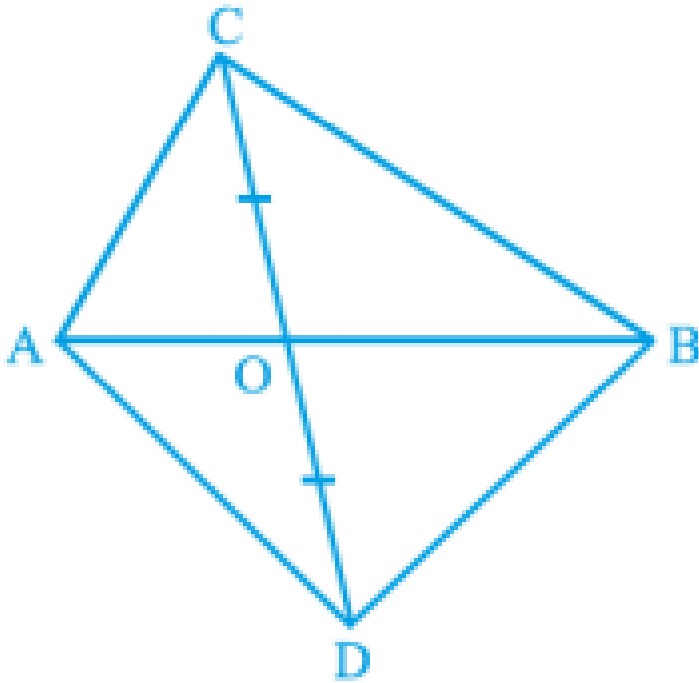
[Watch Video Solution](#)

3. Median of a data, arranged in ascending order 7, 10, 15, x , y , 27, 30 is 17 and when one more observation 50 is added to the data, the median has become 18. Find x and y .



[Watch Video Solution](#)

4. Find the median marks in the data.



आकृति 9.24



Watch Video Solution

5. In finding the median, the given data must be written in order. Why ?



[Watch Video Solution](#)

Do This

1. Which of the following are primaryt and secondary data ?

(i) Collection of the data about enrollment of students in your school for a period from 2001

to 2010.

(ii) Height of students in your class recorded by physical education teacher.



[Watch Video Solution](#)

Think Discuss And Write

1. Give 3 situations, where mean, median and mode are separately appropriate and counted. Consider a situation where fans of two cricketers Raghu and Gautam claim that their

sta score better than other. They made comparison on the basis of last 5 matches.

Matches		1 st	2 nd	3 rd	4 th	5 th
Runs	Raghu	50	50	76	31	100
made	Gautam	65	23	100	100	10



[Watch Video Solution](#)

Think And Discuss

1. Classify your class mates according to their heights and find the mode of it.



[Watch Video Solution](#)

