



CHEMISTRY

BOOKS - NARENDER AVASTHI CHEMISTRY (ENGLISH)

GASEOUS STATE

Level 1

1. Which of the following statements is not correct about the three states of matter, i.e., solid, liquids and gas?

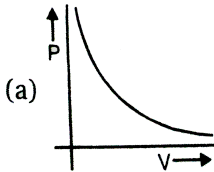
- A. Molecules of a solid possess least energy whereas those of a gas possess highest energy
- B. The density of solids is highest whereas that of gases is lowest
- C. Gases and liquids possess definite volumes

D. Molecules of a solids possess vibratory motion

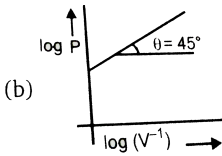
Answer: c

 Watch Video Solution

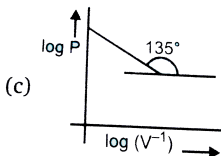
2. Which of the following plots does not represent Boyle's law?



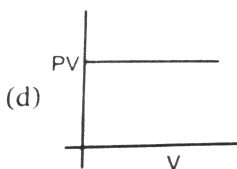
A.



B.



C.



D.

Answer: c

 [Watch Video Solution](#)

3. A certain sample of gas has a volume of 0.2 litre measured at 1 atm pressure and 0°C . At the same pressure but at 273°C , its volume will be

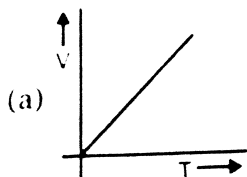
- A. 0.4 litre
- B. 0.8 litre
- C. 27.8 litres
- D. 55.6 litres

Answer: a

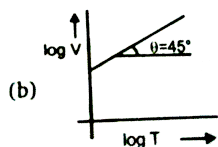
 [Watch Video Solution](#)

4. Among the following curves, which is not according to Charle's law

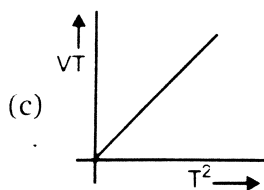
?



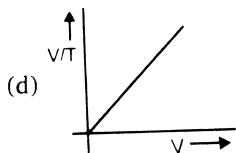
A.



B.



C.



D.

Answer: d

 Watch Video Solution

5. Initial temperature of an ideal gas is $75^{\circ}C$. At what temperature, the sample of neon gas would be heated to double its pressure, if the initial volume of gas is reduced by 15%?

A. $319^{\circ}C$

B. $592^{\circ}C$

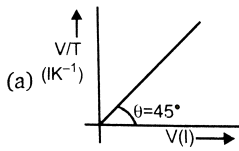
C. $128^{\circ}C$

D. $60^{\circ}C$

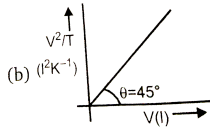
Answer: a

 [Watch Video Solution](#)

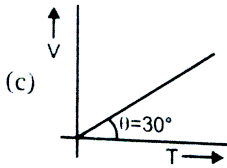
6. Which is correct curve for Charle's law, when the curve is plotted at 0.821 atm pressure for 10 mole ideal gas?



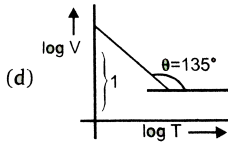
A.



B.



C.



D.

Answer: b



Watch Video Solution

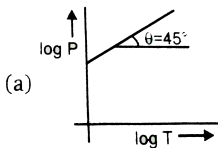
7. At constant volume, for a fixed number of moles of a gas, the pressure of the gas increases with the rise in temperature due to

- A. increase in the average molecular speed
- B. decrease in rate of collision amongst molecules
- C. increase in molecular attraction
- D. decrease in mean free path

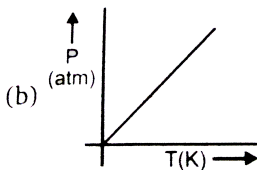
Answer: a

 **Watch Video Solution**

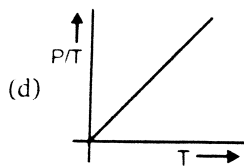
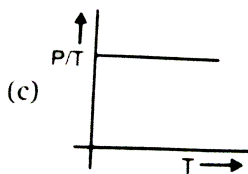
8. which in not correct curve for Gay-luacc's law ?



A.



B.



Answer: d

 [Watch Video Solution](#)

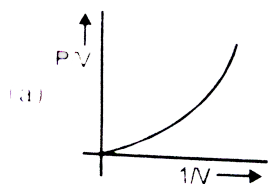
9. Three flasks of equal volumes contain CH_4 , CO_2 , and Cl_2 gases respectively. They will contain equal number of molecules if :

- A. the mass of all the gasses is same
- B. the mass of all the gas is same but temperature is different
- C. temperature and pressure of all the flasks are same
- D. temperature, pressure and masses same in the flasks

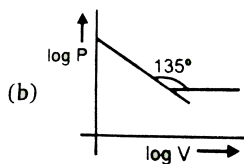
Answer: C

 Watch Video Solution

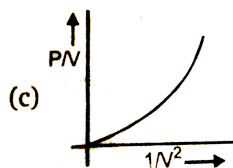
10. Which is incorrect curve for Boyle's law ?



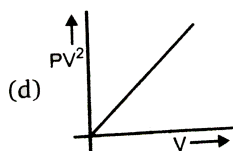
A.



B.



C.



D.

Answer: c

 [Watch Video Solution](#)

11. Equal volumes of gases at the same temperature and pressure contain equal number of particles. This statement is a direct consequence of

- A. Avogadro's law
- B. Charle's law
- C. ideal gas equation
- D. law of partial pressure

Answer: a

 [Watch Video Solution](#)

12. A 2.24L cylinder of oxygen at 1 atm and 273 K is found to develop a leakage. When the leakage was plugged the pressure dropped to 570 mm of Hg. The number of moles of gas that escaped will be :

A. 0.025

B. 0.05

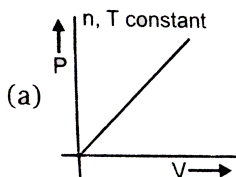
C. 0.075

D. 0.09

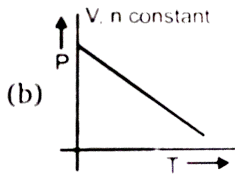
Answer: a

 [Watch Video Solution](#)

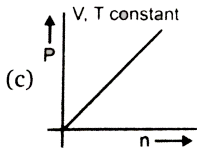
13. Which of the following curve is correct for an ideal gas ?



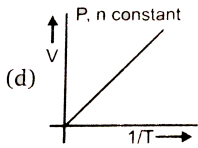
A.



B.



C.



D.

Answer: c



Watch Video Solution

14. In the equation of state of an ideal gas $PV = nRT$, the value of the universal gas constant is not correct :

A. $8.314 \text{ JK}^{-1}\text{mol}^{-1}$

B. $0.0821 \text{ atm L mol}^{-1}\text{K}^{-1}$

C. $0.8314 \text{ bar L mol}^{-1} \text{K}^{-1}$

D. $2 \text{ cal mol}^{-1} \text{K}^{-1}$

Answer: c



[Watch Video Solution](#)

15. At 0°C and one atm pressure, a gas occupies 100 cc. If the pressure is increased to one and a half-time and temperature is increased by one-third of absolute temperature, then final volume of the gas will be:

A. 80 cc

B. 88.9 cc

C. 66.7 cc

D. 100 cc

Answer: b

 [Watch Video Solution](#)

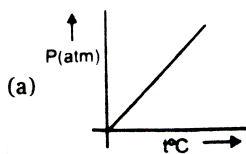
16. 10 g of a gas at 1 atm and 273 K occupies 5 litres. The temperature at which the volume becomes double for the same mass of gas at the same pressure is:

- A. 273 K
- B. $-273^{\circ}C$
- C. $273^{\circ}C$
- D. $546^{\circ}C$

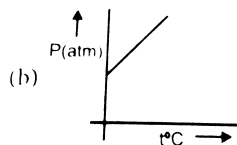
Answer: c

 [Watch Video Solution](#)

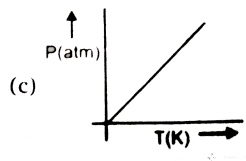
17. Which of the following curve does not represent Gay-lusacc's law?



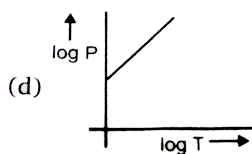
A.



B.



C.



D.

Answer: a

 Watch Video Solution

18. Densities of two gases are in the ratio 1:2 and their temperatures are in the ratio 2:1, then the ratio of their respective pressure is

A. 1:1

B. 1:2

C. 2:1

D. 4:1

Answer: a

 [Watch Video Solution](#)

19. Two separate bulbs contain ideal gas A and B . The density of a gas A is twice that of a gas B . The molecular mass of A is half that of gas B . The two gases are at the same temperature. The ratio of the pressure of A to that gas B is

A. 2

B. $1/2$

C. 4

D. $1/4$

Answer: c



Watch Video Solution

20. Volume of the air that will be expelled from a vessel of 300cm^3 when it is heated from 27°C to 37°C at the same pressure will be

A. 310 cm^3

B. 290 cm^3

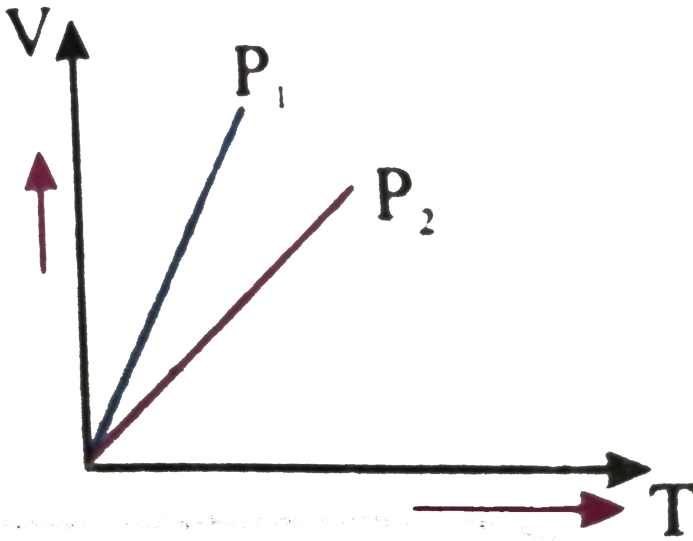
C. 10 cm^3

D. 37 cm^3

Answer: c

 Watch Video Solution

21. For an ideal gas $V - T$ curves at constant pressure P_1 & P_2 are shown in figure, from the figure



A. $P_1 > P_2$

B. $P_1 < P_2$

C. $P_1 = P_2$

D. All of these

Answer: b

 [Watch Video Solution](#)

22. Two flasks A and B of 500 mL each are respectively filled with O_2 and SO_2 at 300 K and 1 atm. Pressure . The flasks will contain:

A. the same number of atoms

B. the same number of molecules

C. more number of moles of molecules in flask A as compared to flask B

D. the same amount of gases

Answer: b

 [Watch Video Solution](#)

23. 2.8 g of a gas at 1atm and 273K occupies a volume of 2.24 litres.

The gas can not be:

A. O_2

B. CO

C. N_2

D. C_2H_4

Answer: a

 [Watch Video Solution](#)

24. Five grams each of the following gases at $87^\circ C$ and 750 mm pressure are taken. Which of them will have the least volume ?

A. HF

B. HCL

C. HBr

D. HI

Answer: d

 [Watch Video Solution](#)

25. At what pressure a quantity of gas will occupy a volume of 60 mL, if it occupies a volume of 100mL at a pressure of 720 mm (while temperature is constant) :

A. 700 mm

B. 800 mm

C. 100 mm

D. 1200 mm

Answer: d

 [Watch Video Solution](#)

26. At 1 atm and 273 K the density of gas, whose molecular weight is 45, is:

A. 44.8 g/L

B. 11.4 g/L

C. 2 g/L

D. 3 g/L

Answer: c

 [Watch Video Solution](#)

27. A small bubble rises from the bottom of a lake, where the temperature and pressure are 8°C and 6.0atm , to the water's surface, where the temperature is 25°C and pressure is 1.0atm . Calculate the final volume of the bubble if its initial volume was 2mL .

- A. 14 mL
- B. 12.72 mL
- C. 11.31 mL
- D. 15 mL

Answer: b



[Watch Video Solution](#)

28. Argon is an inert gas used in light bulbs to retard the vaporization of the filament. A certain light-bulb containing argon at

1.25 atm and $18^{\circ}C$ is heated to $85^{\circ}C$ at constant volume. Calculate its final pressure.

A. 1.53 atm

B. 1.25 atm

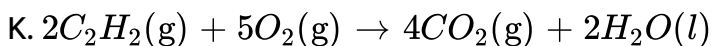
C. 1.35 atm

D. 2 atm

Answer: a

 [Watch Video Solution](#)

29. Calculate the volume of O_2 at 1 atm and 273 K required for the complete combustion of 2.64 L of acetylene (C_2H_2) at 1 atm and 273



A. 3.6 L

B. 1.056 L

C. 6.6 L

D. 10 L

Answer: c



[Watch Video Solution](#)

30. The density of $O_2(g)$ is maximum at :

A. STP

B. 273 K and 2 atm

C. 546 K and 1 atm

D. 546 K and 2 atm

Answer: b



[Watch Video Solution](#)

31. At $27^{\circ}C$ a sample of ammonia gas exerts a pressure of 5.3 atm. What is the pressure when the volume of the gas is reduced to one-tenth of the original value at the same temperature ?

- A. 0.53 atm
- B. 5.3atm
- C. 53 atm
- D. None of these

Answer: c

 [Watch Video Solution](#)

32. A certain amount of gas at $25^{\circ}C$ and at a pressure of 0.80 atm is kept in a glass vessel. Suppose that the vessel can withstand a pressure of 2.0 atm. How high can you raise the temperature of the gas without bursting the vessel?

A. $745^{\circ}C$

B. $472^{\circ}C$

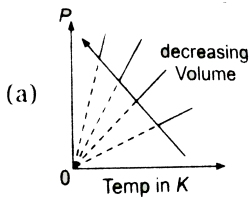
C. $500^{\circ}C$

D. None of these

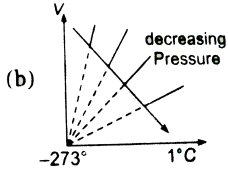
Answer: b

 **Watch Video Solution**

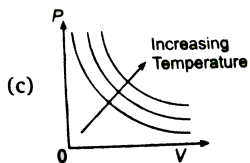
33. Which one of these graphs for an ideal gas having a fixed amount, the arrow indication, is incorrectly marked ?



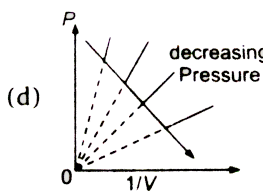
A.



B.



C.



D.

Answer: b

 [Watch Video Solution](#)

34. The pressure of sodium vapour in a 1.0 L container is 10 torr at 1000°C . How many atoms are in the container?

A. 9.7×10^{17}

B. 7.6×10^{19}

C. 4.2×10^{17}

D. 9.7×10^{19}

Answer: b



Watch Video Solution

35. An ideal gaseous mixture of ethane (C_2H_6) and ethene (C_2H_4) occupies 28 litre at $1\text{ atm } 0^\circ C$. The mixture reacts completely with $128\text{ gm } O_2$ to produce CO_2 and H_2O . Mole of fraction at C_2H_6 in the mixture is-

A. 0.6

B. 0.4

C. 0.5

D. 0.8

Answer: a

 [Watch Video Solution](#)

36. A certain hydrate has the formula $\text{MgSO}_4 \cdot x\text{H}_2\text{O}$. A quantity of 54.2 g of the compound is heated in an oven to drive off the water. If the steam generated exerts a pressure of 24.8 atm in a 2.0 L container at 120°C , calculate x .

A. 2

B. 5

C. 6

D. 7

Answer: d

 [Watch Video Solution](#)

37. Air entering the lungs ends up in tiny sacs called alveoli. From the alveoli, the oxygen diffuses into the blood. The average radius of the alveoli is 0.0050 cm and the air inside contains 14 per cent oxygen. Assuming that the pressure in the alveoli is 1.0 atm and the temperature is 37°C , calculate the number of oxygen molecules in one of the alveoli.

A. 6×10^{13}

B. 10^{24}

C. 1.7×10^{22}

D. 1.7×10^{12}

Answer: d



Watch Video Solution

38. Nitrogen forms several gaseous oxides. One of them has a density of 1.33 g/L measured 764 mmHg and 150°C . Write the formula of the compound.

A. NO

B. N_2O

C. NO_2

D. N_2O_5

Answer: c

 [Watch Video Solution](#)

39. Starting out on a trip into the mountains, you inflate the tires on your automobile to a recommended pressure of 3.21×10^5 Pa on a day when the temperature is -5.0°C . You drive to the beach, where

the temperature is $28.0^{\circ}C$. Assume that the volume of the tire has increased by 3%. What is the final pressure in the tyres?

- A. 350 Pa
- B. 3500 Pa
- C. 3.5×10^5 Pa
- D. None of these

Answer: c

 [Watch Video Solution](#)

40. A compressed cylinder of gas contains 1.50×10^3 g of N_2 gas at a pressure of 2.0×10^7 Pa and a temperature of $17.1^{\circ}C$. What volume of gas has been released into the atmosphere if the final pressure in the cylinder is 1.80×10^5 Pa ? Assume ideal behaviour and that the gas temperature is unchanged.

A. 1264 L

B. 126 L

C. 12600 L

D. 45 L

Answer: a



Watch Video Solution

41. A high-altitude balloon is filled with $1.41 \times 10^4 L$ of hydrogen at a temperature of $21^\circ C$ and a pressure of 745 torr. What is the volume of the balloon at a height of 20 km, where the temperature is $-48^\circ C$ and the pressure is 63.1 torr?

A. $1.274 \times 10^5 L$

B. $1.66 \times 10^5 L$

C. $1.66 \times 10^4 L$

D. None of these

Answer: a

 [Watch Video Solution](#)

42. The atmospheric pressure on Mars is 0.61 kPa. What is the pressure in mm Hg?

A. 0.63

B. 4.6

C. 6.3

D. 3.2

Answer: b

 [Watch Video Solution](#)

43. The density of liquid gallium at $30^{\circ}C$ is 6.095 g/mL . Because of its wide liquid range (30 to $2400^{\circ}C$), gallium is used as a barometer fluid at high temperature. What height (in cm) of gallium will be observed on a day when the mercury barometer reads 740 torr ? (The density of mercury is 13.6 g/mL)

A. 322

B. 285

C. 165

D. 210

Answer: c



[Watch Video Solution](#)

44. A weather balloon is inflated with helium. The balloon has a volume of 100 m^3 and it must be inflated to pressure of 0.10 atm . If

50 L gas cylinders of helium at a pressure of 100 atm are used, how many cylinders are needed? Assume that the temperature is constant.

A. 2

B. 3

C. 4

D. 1

Answer: a



[Watch Video Solution](#)

45. A balloon contains 14.0 L of air at 760 torr. What will be the volume of the balloon when it is taken to a depth of 10 ft. in a swimming pool? Assume that the temperature of the air and water are equal. (density : Hg=13.6g/mL)

A. 11

B. 11.3

C. 10

D. 10.8

Answer: d



Watch Video Solution

46. A 0.50 L container is occupied by nitrogen at a pressure of 800 torr and a temperature of $0^{\circ}C$. The container can only withstand a pressure of 3.0 atm. What is the highest temperature ($^{\circ}C$) to which the container may be heated?

A. 505

B. 450

C. 625

D. 560

Answer: a

 [Watch Video Solution](#)

47. Equal volumes of oxygen gas and a second gas weigh 1.00 and 2.375 grams respectively under the same experimental conditions.

Which of the following is the unknown gas?

A. NO

B. SO_2

C. CS_2

D. CO

Answer: c

 [Watch Video Solution](#)

48. A high altitude balloon contains 6.81 g of helium in 1.16×10^4 L at -23°C . Assuming ideal gas behaviour, how many grams of helium would have to be added to increase the pressure to 4.0×10^{-3} atm?

A. 1.27 g

B. 1.58 g

C. 2.68 g

D. 2.23 g

Answer: d

 [Watch Video Solution](#)

49. A 4.40 g piece of solid CO_2 (dry ice) is allowed to sublime in a balloon. The final volume of the balloon is 1.00 L at 300 K. What is

the pressure (atm) of the gas?

A. 0.122

B. 2.46

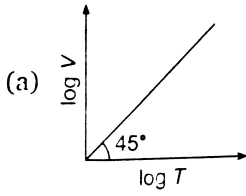
C. 122

D. 24.6

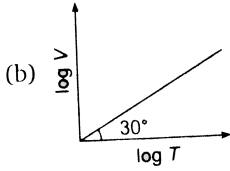
Answer: b

 [Watch Video Solution](#)

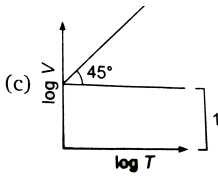
50. For a closed container containing 10 moles of an ideal gas, at constant pressure of 0.82 atm, which graph correctly represent, variation of $\log V$ us $\log T$ where volume is in litre and temp. in kelvin :



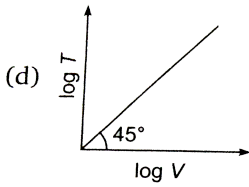
A.



B.



C.



D.

Answer: a

 [Watch Video Solution](#)

51. The intercept on y-axis and slope of curve plotted between P/T vs.

T

(For an ideal gas having 10 moles in a closed rigid container of volume 8.21 L. (P = Pressure in atm and T = Temp. in K, $\log_{10} 2 = 0.30$)) are respectively :

A. 0.01, 0

B. 0.1, 0

C. 0.1, 1

D. 10, 1

Answer: b

 [Watch Video Solution](#)

52. A He atom at 300 K is released from the surface of the earth to travel upwards. Assuming that it undergoes no collision with other molecules, how high will it be before coming to the rest?

A. 9.53 m

B. 9.5 m

C. 953 m

D. 9.53×10^4 m

Answer: d



Watch Video Solution

53. The density of gas A is twice that of B at the same temperature the molecular weight of gas B is twice that of A . The ratio of pressure of gas A and B will be :

A. 1:6

B. 1:1

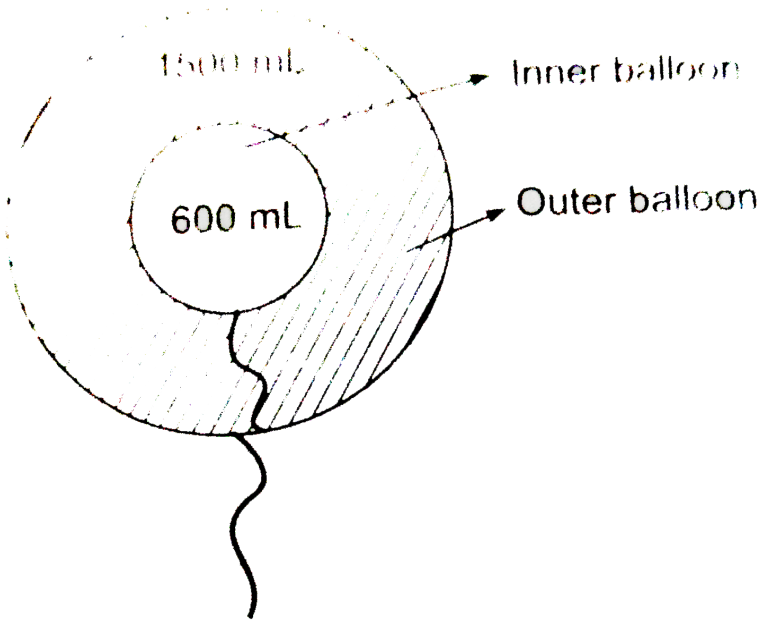
C. 4:1

D. 1:4

Answer: c

 Watch Video Solution

54. Two inflated balloons I and II (thin skin) having volume 600 mL and 1500 mL at 300 K are taken as shown in diagram. If maximum volume of inner and outer balloons are 800 mL and 1800 mL respectively then find the balloon which will burst first on gradual heating.



- A. inner balloon
- B. outer balloon
- C. both simultaneously
- D. unpredictable

Answer: b



[Watch Video Solution](#)

55. An open flask containing air is heated from $300K$ to $500K$. What percentage of air will be escaped to the atmosphere, if the pressure is kept constant ?

- A. 80
- B. 40
- C. 60
- D. 20

Answer: b



Watch Video Solution

56. An open flask containing air is heated from $300K$ to $500K$. What percentage of air will be escaped to the atmosphere, if the pressure is kept constant ?

A. 80

B. 40

C. 60

D. 20

Answer: b



Watch Video Solution

57. The value of universal gas constant R depends on :

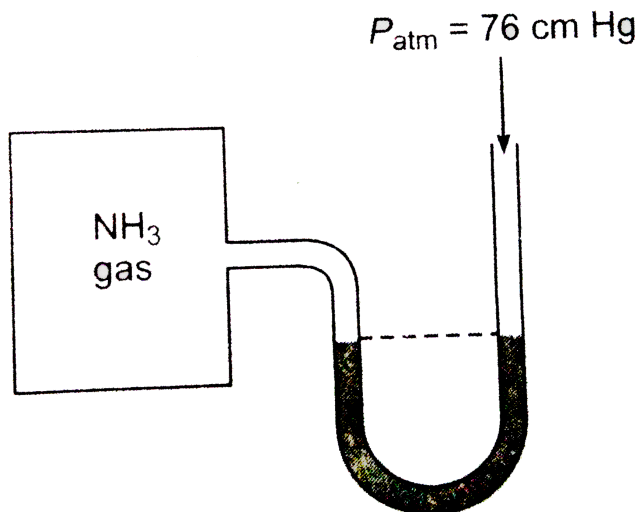
- A. temperature of gas
- B. volume of gas
- C. number of moles of gas
- D. units of volume and pressure

Answer: d

 [Watch Video Solution](#)

58. A manometer attached to a flask contains with ammonia gas have no difference in mercury level initially as shown in diagram. After sparking into the flask, ammonia is partially dissociated as $2NH_3 (g) \rightarrow N_2 (g) + 3H_2 (g)$ now it have difference of 6 cm in mercury level in two columns, what is partial pressure of $H_2 (g)$ at

equilibrium?



- A. 9 cm Hg
- B. 18 cm Hg
- C. 27 cm Hg
- D. None of these

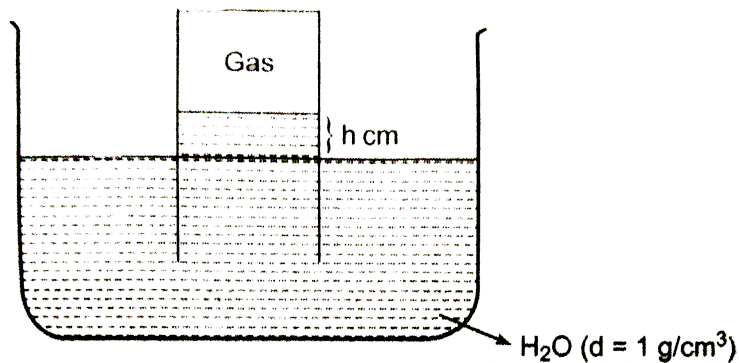
Answer: a

 [Watch Video Solution](#)

59. An ideal gas is collected by downward displacement of water.

Select the correct expression for P_{gas} according to the diagram

$[d_{Hg} = 13.6g/cm^3]$:



A. $P_{gas} = P_{atm} - \left[\text{aq. Tension} + \frac{h}{13.6} \right]$

B. $P_{gas} = P_{atm} - hdg$

C. $P_{gas} = P_{atm} + hdg$

D. $P_{gas} = P_{atm} - \text{aq. Tension} + \frac{h}{13.6}$

Answer: a

 Watch Video Solution

60. A bubble of gas released at the bottom of a lake increases to four times its original volume when it reaches the surface. Assuming that atmospheric pressure is equivalent to the pressure exerted by a column of water 10 m high, what is the depth of the lake?

A. 20 m

B. 10 m

C. 30 m

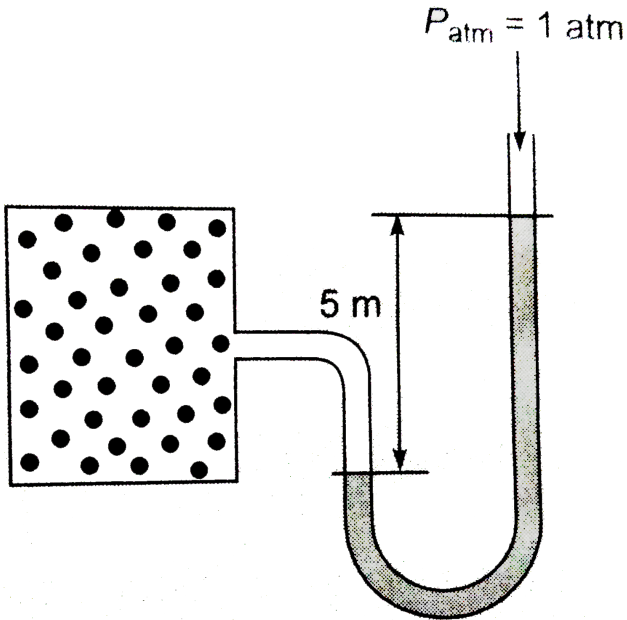
D. 40 m

Answer: c

 [Watch Video Solution](#)

61. Calculate the number of moles of gas present in the container of volume 10 L at 300 K, if the manometer containing glycerine shows 5 m difference in level as shown diagram.

(Given : $d_{\text{glycerin}} = 2.72\text{g/mL}$, $d_{\text{mercury}} = 13.6\text{g/mL}$)



- A. 0.94 mole
- B. 0.49 mole
- C. 0.64 mole
- D. none of these

Answer: a



Watch Video Solution

62. A rigid vessel of volume 0.50m^3 containing H_2 at 20.5°C and a pressure of 611×10^3 Pa is connected to a second rigid vessel of volume 0.75m^3 containing Ar at 31.2°C at a pressure of 433×10^3 Pa. A valve separating the two vessels is opened and both are cooled to a temperature of 14.5°C . What is the final pressure in the vessels?

A. 2×10^5

B. 3.22×10^5 Pa

C. 4840 pa

D. 4.84×10^5 Pa

Answer: d



[Watch Video Solution](#)

63. Two glass bulbs A and B are connected by a very small tube having a stop cock. Bulb A has a volume of 100 cm^3 and contained the gas, while bulb B was empty. On opening the stop cock. The pressure fell down to 40%. The volume of the bulb B must be:

A. 100 cm^3

B. 200 cm^3

C. 250 cm^3

D. 400 cm^3

Answer: d

 [Watch Video Solution](#)

64. A mixture of C_2H_2 and C_3H_8 occupied a certain volume at 80 mm Hg. The mixture was completely burnt to CO_2 and $H_2O(l)$. When the pressure of CO_2 was found to be 230 mm Hg at the same

temperature and volume, the mole fraction of C_3H_8 in the mixture is :

- A. 0.125
- B. 0.875
- C. 0.6
- D. 0.8

Answer: b

 [Watch Video Solution](#)

65. The total pressure of a mixture of oxygen and hydrogen is 1.0 atm. The mixture is ignited and the water is removed. The remaining gas is pure hydrogen and exerts a pressure of 0.40 atm when measured at the same values of T and V as the original mixture. What was the composition of the original mixture in mole fraction ?

A. $x_{O_2} = 0.2, x_{H_2} = 0.8$

B. $x_{O_2} = 0.4, x_{H_2} = 0.6$

C. $x_{O_2} = 0.6, x_{H_2} = 0.4$

D. $x_{O_2} = 0.8, x_{H_2} = 0.2$

Answer: a

 [Watch Video Solution](#)

66. Two closed vessel A and B of equal volume of 8.21 L are connected by a narrow tube of negligible volume with open valve. The left hand side container is found to contain 3 mole CO_2 and 2 mole of He at 400 K. What is the partial pressure of He in vessel B at 400 K?

(a) 2.4 atm

(b) 8 atm

(c) 12 atm

(d) None of these

A. 2.4 atm

B. 8 atm

C. 12atm

D. None of these

Answer: b

 [Watch Video Solution](#)

67. At STP a container contains 1 mole of H_2 , 2 mole Ne , 3 mole O_2 and 4 mole N_2 . Without changing total pressure if 2 mole of O_2 is removed, the partial pressure of O_2 will be decreased by

A. 26 %

B. 40 %

C. 58.33 %

D. 66.66 %

Answer: c

 Watch Video Solution

68. $821\text{mLN}_2(g)$ was collected over liquid water at 300 K and 1 atm. If vapour pressure of H_2O is 30 torr then moles of $N_2(g)$ in moist gas mixture is :

- A. 0.39
- B. 0.032
- C. 0.96
- D. 0.0013

Answer: b

 Watch Video Solution

69. Let P and P_s be the partial pressure of $H_2O(g)$ and vapour pressure of $H_2O(l)$ respectively. Then the % relative humidity is given by:

A. $\frac{P_s + P}{P_s} \times 100$

B. $\frac{P}{P_s} \times 100$

C. $\frac{P_s}{P} \times 100$

D. $(P + P_s) \times 100$

Answer: b

 [Watch Video Solution](#)

70. The vapour pressure of water at $80^\circ C$ is 355 mm of Hg. 1 L vessel contains O_2 at $80^\circ C$, which is saturated with water and the total pressure being 760 mm of Hg. The contents of the vessel were

pumped into 0.3 L vessel at the same temperature. What is the partial pressure of O_2 ?

- A. 1350 Hg
- B. 2178.3 Hg
- C. 121.5 Hg
- D. 355 Hg

Answer: a

 [Watch Video Solution](#)

71. Which of the following gaseous mixture does not follow Dalton's law of partial pressure?

- A. SO_2 and Cl_2
- B. CO_2 and N_2

C. CO and CO_2

D. CO and N_2

Answer: a

 [Watch Video Solution](#)

72. Equal masses of methane and oxygen are mixed in an empty container at $25^\circ C$. The fraction of the total pressure exerted by oxygen is:

A. $\frac{2}{3}$

B. $\frac{1}{3} \times \frac{273}{298}$

C. $\frac{1}{3}$

D. $\frac{1}{2}$

Answer: c

 [Watch Video Solution](#)

73. A box of 1 L capacity is divided into two equal compartments by a thin partition which are filled with 2g H_2 and 16 g CH_4 respectively. The pressure in each compartment is recorded as P atm. The total pressure when partition is removed will be:

A. P

B. 2P

C. $P/2$

D. $P/4$

Answer: a

 [Watch Video Solution](#)

74. If $10^{-4} dm^3$ of water is introduced into a $1.0 dm^3$ flask to $300K$ how many moles of water are in the vapour phase when equilibrium is established ? (Given vapour pressure of H_2O at $300K$ is $3170 Pa$ $R = 8.314 JK^{-1} mol^{-1}$).

A. 1.27×10^{-3} mole

B. 5.56×10^{-3} mole

C. 1.53×10^{-2} mole

D. 4.46×10^{-2} mole

Answer: a

 [Watch Video Solution](#)

75. Dalton's law of partial pressures is not applicable to

A. H_2 and N_2 mixture

B. H_2 and Cl_2 mixture

C. H_2 and CO_2 mixture

D. none of these

Answer: b

 [Watch Video Solution](#)

76. 56 g of nitrogen and 96 g of oxygen are mixed isothermally and at a total pressure of 10 atm. The partial pressures of oxygen and nitrogen (in atm) are respectively :

A. 4,6

B. 5,5

C. 2,8

D. 6,4

Answer: d

 [Watch Video Solution](#)

77. The closed containers of the same capacity and at the same temperature are filled with 44 g of H_2 in one and 44 g of CO_2 in the other . If the pressure of carbon dioxide in the second container is 1 atm , then pressure of hydrogen in the first container would be :

- A. 1 atm
- B. 10 atm
- C. 22 atm
- D. 44 atm

Answer: c

 [Watch Video Solution](#)

78. A jar contains a gas and a few drops of water at $T K$. The pressure in the jar is 830mm of Hg. The temperature of the jar is reduced by 1% . The vapour pressure of water at two temperatures are 300 and 25 mm of Hg. Calculate the new pressure in the jar .

(a) 792mm of Hg

(b) 817mm of Hg

(c) 800mm of Hg

(d) 840mm of Hg

A. 792 mm of Hg

B. 817 mm of Hg

C. 800 mm of Hg

D. 840 mm of Hg

Answer: b

 [Watch Video Solution](#)

79. O_2 and SO_2 gases are filled in ratio of 1 : 3 by mass in a closed container of 3 L at temperature of $27^\circ C$. The partial pressure of O_2 is 0.60 atm, the concentration of SO_2 would be

- A. 0.36
- B. 0.036
- C. 3.6
- D. 36

Answer: b

 [Watch Video Solution](#)

80. A gaseous mixture contains three gaseous A , B and C with a total number of moles of 10 and total pressure of 10atm . The partial pressure of A and B are 3atm and 1 atm respectively and if C has

molecular weight of $2g/mol$. Then, the weight of C present in the mixture will be :

A. 8 g

B. 12 g

C. 3 g

D. 6 g

Answer: b

 [Watch Video Solution](#)

81. A rigid container contains 5 mole H_2 gas at some pressure and temperature. The gas has been allowed to escape by simple process from the container due to which pressure of the gas becomes half of its initial pressure and temperature become $(2/3)^{rd}$ of its initial. The mass of gas remaining is :

A. 7.5 g

B. 1.5 g

C. 2.5 g

D. 3.5 g

Answer: a



[Watch Video Solution](#)

82. Pressure of 1 g ideal gas X at 300 K is 2 atm. When 2 g of another gas Y is introduced in the same vessel at same temperature, the pressure become 3 atm. The correct relationship between molar mass of X and Y is :

A. $M_Y = 2M_X$

B. $M_Y = 4M_X$

C. $M_X = 4M_Y$

D. None of these

Answer: b

 [Watch Video Solution](#)

83. Dry ice is solid carbon dioxide. A 0.050 g sample of dry ice is placed in an evacuated 4.6 L vessel at $30^{\circ}C$. Calculate the pressure inside the vessel after all the dry has been converted to CO_2 gas.

A. 6.14 atm

B. 0.614 atm

C. 0.0614 atm

D. 6.14×10^{-3} atm

Answer: d

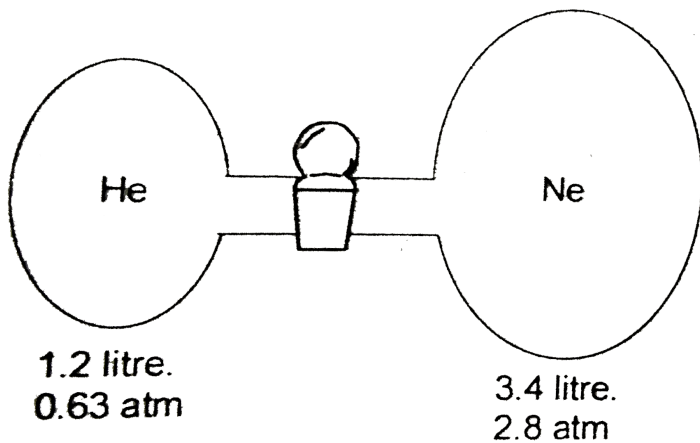
 [Watch Video Solution](#)

84. A mixture of helium of neon gases is collected over water at 28.0°C and 745 mmHg. If the partial pressure of helium is 368 mmHg, what is the partial pressure of neon?

- A. 348.7 mmHg
- B. 377 mmHg
- C. 384.7 mmHg
- D. none of these

Answer: a

 [Watch Video Solution](#)



Consider the following apparatus. Calculate the partial pressure of He after opening the valve. The temperature is remain constant at $16^{\circ}C$

- (a) 0.164 atm
- (b) 1.64 atm
- (c) 0.328 atm
- (d) 1 atm

- A. 0.164 atm
- B. 1.64 atm
- C. 0.328 atm

D. 1 atm

Answer: a

 [Watch Video Solution](#)

86. Oxygen gas generated by the decomposition of potassium chlorate is collected. The volume of oxygen collected at $24^{\circ}C$ and atmospheric pressure of 760mmHg is 128mL . Calculate the mass (in grams) of oxygen gas obtained. The pressure of water vapour at $24^{\circ}C$ is 22.4mmHg .

A. 1.36 g

B. 1.52 g

C. 0.163 g

D. 1.63 g

Answer: c



Watch Video Solution

87. The quantity $\frac{PV}{k_B T}$ represents the (k_B : Boltzmann constant)

- A. number of particles of the gas
- B. mass of the gas
- C. number of moles of the gas
- D. translation energy of the gas

Answer: a



Watch Video Solution

88. Which of the following statements about kinetic energy (K.E.) is true?

- A. All objects moving with the same velocity have the same K.E.

- B. The K.E. of a body will quadruple if its velocity doubles
- C. As the velocity of a body increases, its K.E. decreases
- D. The K.E. of a body is independent of its mass

Answer: b

 [Watch Video Solution](#)

89. The Ne atom has 10 times the mass of H_2 molecule. Which of the following statements is true?

- I. At $25^\circ C$ both of them have the same kinetic energy.
- II. Ten moles of H_2 would have the same volume as 1 mole of Ne at same temp. and pressure.
- III. One mole of Ne exerts the same pressure as one mole of H_2 at STP.
- IV. A H_2 molecule travels 10 times faster than Ne atom at same

temperature.

V. At STP, one litre of Ne has 10 times the density of 1 litre of H_2 .

A. II, IV, V

B. I, III, V

C. I, II, III

D. I, II

Answer: b



Watch Video Solution

90. Which of the following is NOT a postulate of the kinetic molecular theory of gases?

A. The gas molecules possess a volume that is negligibly small compared to the container

B. The pressure and volume of a gas are inversely related

C. Gases consist of discrete particles that are in constant chaotic motion

D. The average kinetic energy of the molecules is directly proportional to the absolute temperature

Answer: B



[Watch Video Solution](#)

91. Which one of the following relationships when graphed does not give a straight line for helium gas?

I. K.E. and T at constant pressure and volume

II. P v/s V at constant temperature for a constant mass

III. V v/s $1/T$ at constant pressure for a constant mass

A. II

B. II and III

C. III

D. I

Answer: b

 [Watch Video Solution](#)

92. Consider Three one -litre flasks labeled A,B and C filled with the gases NO , NO_2 , and N_2O , respectively, each at 1 atm and 273 K. In which flask do the molecules have the highest average kinetic energy?

A. Flask C

B. All are the same

C. Flask A

D. None

Answer: b



Watch Video Solution

93. Which of the following statements is false?

- A. The product of pressure and volume of fixed amount of a gas is independent of temperature.
- B. Molecules of different gasses have the same kinetic energy at a given temperature.
- C. The gas equation is not valid at high pressure and low temperature.
- D. The gas constant per molecule is known as Boltzmann's constant.

Answer: a

94. Which is not correct in terms of kinetic theory of gases?

- a. Gaseous particles are considered as point mass.
- b. The gaseous molecules are in random motion.
- c. When gaseous molecules collide, they lose energy.
- d. When the gas is heated, the molecules moves faster.

- A. Gaseous particles are considered as point mass.
- B. The gaseous molecules are in random motion.
- C. When gaseous molecules collide, they lose energy.
- D. When the gas is heated, the molecules moves faster.

Answer: c

95. Two flasks A and B have equal volumes. A is maintained at 300 K and B at 600 K. A contains H_2 gas, B has an equal mass of CO_2 gas.

Find the ratio of total K.E. of gases in flask A to that of B.

A. 1:2

B. 11:1

C. 33:2

D. 55:7

Answer: b

 [Watch Video Solution](#)

96. Kinetic energy and pressure of a gas of unit volume are related

as:

A. $P = \frac{2}{3}E$

B. $P = \frac{3}{2}E$

C. $P = \frac{E}{2}$

D. $P=2E$

Answer: a

 [Watch Video Solution](#)

97. Two flask A and B of equal volumes maintained at temperature $300K$ and $700K$ contain equal mass of $He(g)$ and $N_2(g)$ respectively. What is the ratio of total translational kinetic energy of gas in flask A to that of flask B ?

A. 1 : 3

B. 3 : 1

C. 3 : 49

D. None of these

Answer: b

 [Watch Video Solution](#)

98. Which of the following change is observed occurs when a substance X is converted from liquid to vapour phase at the standard boiling point?

I. Potential energy of the system ceceases

II. The distance between molecules increases

III.The average kinetic energy of the molecules in both phases are equal

A. I only

B. II only

C. III only

D. II and III only

Answer: d

 [Watch Video Solution](#)

99. A mixture of Ne and Ar kept in a closed vessel at 250 K has a total K.E.=3 kJ. The total mass of Ne and Ar is 30 g. Find mass % of Ne in gaseous mixture at 250 K.

A. 61.63

B. 38.37

C. 0.5

D. 28.3

Answer: d

 [Watch Video Solution](#)

100. In two vessels of 1 litre each at the same temperature 1g of H_2 and 1g of CH_4 are taken. For these gases:

- A. V_{rms} values will be same
- B. Kinetic energy per mol will be same
- C. Total kinetic energy will same
- D. Pressure will be same

Answer: b

 [Watch Video Solution](#)

101. Four particles have speed 2, 3, 4 and 5 cm/s respectively Their *RMS* speed is .

- A. 3.5 cm/s
- B. $(27/2)$ cm/s

C. $\sqrt{54}$ cm/s

D. $\sqrt{54}/2$ cm/s

Answer: d



Watch Video Solution

102. A gaseous mixture contains 4 molecules with a velocity of 6 cm sec^{-1} , 5 molecules with a velocity of 2 cm sec^{-1} and 10 molecules with a velocity of 3 cm sec^{-1} . What is the rms speed of the gas:

A. 2.5 cm sec^{-1}

B. 1.9 cm sec^{-1}

C. 3.6 cm sec^{-1}

D. 4.6 cm sec^{-1}

Answer: c

 [Watch Video Solution](#)

103. The ratio between the root mean square speed of H_2 at $50K$ and that of O_2 at $800K$ is

A. 4

B. 2

C. 1

D. $1/4$

Answer: c

 [Watch Video Solution](#)

104. If C_1, C_2, C_3, \dots represent the speeds on n_1, n_2, n_3, \dots molecules, then the root mean square speed is

$$\text{A. } \sqrt{\frac{n_1 C_1^2 + n_2 C_2^2 + n_3 C_3^2 + \dots}{n_1 + n_2 + n_3 + \dots}}$$

$$\text{B. } \sqrt{\frac{(n_1 + n_2 + n_3 + \dots)^2}{n_1 C_1^2 + n_2 C_2^2 + n_3 C_3^2 + \dots}}$$

$$\text{C. } \sqrt{\frac{(n_1 C_1)}{n_1} + \frac{(n_2 C_2)}{n_2} + \frac{(n_3 C_3)}{n_3}}$$

$$\text{D. } \sqrt{\frac{(n_1 C_1 + n_2 C_2 + n_2 C_3 + \dots)^2}{n_1 + n_2 + n_3 + \dots}}$$

Answer: a



Watch Video Solution

105. The root mean square speed of hydrogen is $\sqrt{5}$ times than that of nitrogen. If T is the temperature of the gas, then :

$$\text{A. } T_{H_2} = T_{N_2}$$

$$\text{B. } T_{H_2} > T_{N_2}$$

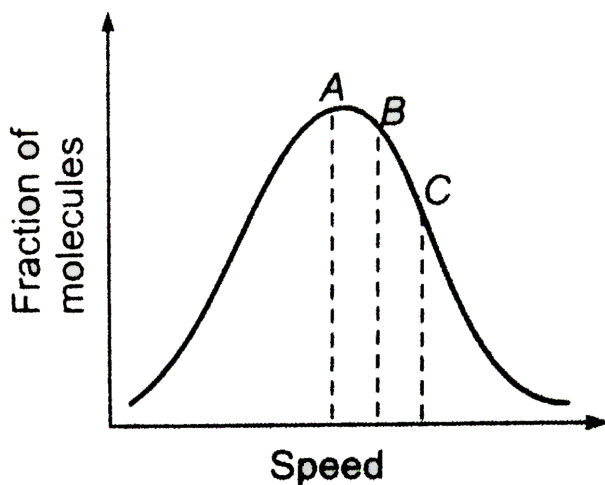
$$\text{C. } T_{H_2} < T_{N_2}$$

$$\text{D. } T_{H_2} = \sqrt{7}T_{N_2}$$

Answer: c

 Watch Video Solution

106. At a definite temperature (T), the distribution of speeds is given by the curve. In the curve points A, B and C indicate the speeds corresponding to :



- A. most probable, average and root mean square speeds
- B. average, root mean square and most probable speeds
- C. root mean square, average and most probable speeds

D. most probable, root mean square and average speeds

Answer: a

 [Watch Video Solution](#)

107. The most probable speed of 8 g of H_2 is 200ms^{-1} . Average kinetic energy (neglect rotational and vibrational energy) of H_2 gas is :

A. 480 J

B. 240 J

C. 120 J

D. none of these

Answer: b

 [Watch Video Solution](#)

108. At what temperature will average speed of the molecules of the second member of the series C_nH_{2n} be the same to that of Cl_2 at $627^\circ C$?

- A. 259.4 K
- B. 400 K
- C. 532.4 K
- D. None of these

Answer: c

 [Watch Video Solution](#)

109. If the v_{rms} is $30R^{1/2}$ at $27^\circ C$ then calculate the molar mass of gas in kilogram.

- A. 0.02 kg/mol

B. 0.001 kg/mol

C. 0.003 kg/mol

D. 1 kg/mol

Answer: d



Watch Video Solution

110. 6×10^{22} gas molecules each of mass 10^{-34} kg are taken in a vessel of 10 litre. What is the pressure exerted by gas molecules ?

The root mean square speed of gas molecules is 100 m/s .

A. 20 Pa

B. $2 \times 10^4 \text{ Pa}$

C. $2 \times 10^5 \text{ Pa}$

D. $2 \times 10^7 \text{ Pa}$

Answer: b

 Watch Video Solution

111. At what temperature will most probable speed of the molecules of the second member of homologous series C_nH_{2n-2} be the same as that of SO_2 at $527^\circ C$.

A. $500^\circ C$

B. $727^\circ C$

C. $227^\circ C$

D. None of these

Answer: c

 Watch Video Solution

112. The root mean square speed of 8 g of He is 300 ms^{-1} . Total kinetic energy of He gas is :

- A. 120 J
- B. 240 J
- C. 360 J
- D. None of these

Answer: c



Watch Video Solution

113. If T_1, T_2 and T_3 are the temperatures at which the $u_{\text{rms}}, u_{\text{average}}, u_{\text{mp}}$ of oxygen gas are all equal to 1500 m/s then the correct statement is :

- A. $T_1 > T_2 > T_3$

B. $T_1 < T_2 < T_3$

C. $T_1 = T_2 = T_3$

D. None of these

Answer: b



Watch Video Solution

114. The density of a gas filled in electric lamp is 0.75 kg/m^3 . After the lamp has been switched on, the pressure in it increases from $4 \times 10^4 \text{ Pa}$ to $9 \times 10^4 \text{ Pa}$. What is increases in u_{rms} ?

A. 100

B. 200

C. 300

D. None of these

Answer: b

 [Watch Video Solution](#)

115. The root mean square speed of an ideal gas at constant pressure varies with density d as .

A. d^2

B. d

C. \sqrt{d}

D. $1/\sqrt{d}$

Answer: d

 [Watch Video Solution](#)

116. The ratio among most probable velocity, mean velocity and root mean velocity is given by

A. $1 : 2 : 3$

B. $1 : \sqrt{2} : \sqrt{3}$

C. $\sqrt{2} : \sqrt{3} : \sqrt{8/\pi}$

D. $\sqrt{2} : \sqrt{8/\pi} : \sqrt{3}$

Answer: d

 [Watch Video Solution](#)

117. The average speed at temperature $T^\circ C$ of $CH_4(g)$ is

$\sqrt{\frac{28}{88}} \times 10^3 ms^{-1}$. What is the value of T ?

A. $240.55^\circ C$

B. $-32.45^\circ C$

C. $3000^{\circ}C$

D. $-24.055^{\circ}C$

Answer: b



[Watch Video Solution](#)

118. At what temperature most probable speed of SO_2 molecule have the same value as root mean square speed of O_2 molecules at 300 K?

A. 150 K

B. 600 K

C. 750 K

D. 900 K

Answer: d

 [Watch Video Solution](#)

119. The *rms* speed of N_2 molecules in a gas is u . If the temperature is doubled and the nitrogen molecules dissociate into nitrogen atom, the *rms* speed becomes

A. $u/2$

B. $2u$

C. $4u$

D. $14u$

Answer: b

 [Watch Video Solution](#)

120. The rate of diffusion of a gas is proportional to

A. $\frac{P}{\sqrt{d}}$

B. $\frac{P}{d}$

C. $\sqrt{\frac{P}{d}}$

D. $\frac{\sqrt{P}}{d}$

Answer: a

 [Watch Video Solution](#)

121. At constant volume and temperature conditions, the rates of diffusion r_A and r_B of gases A and B having densities P_A and P_B are related by the expression :

A. $r_A = r_B \cdot (p_A/p_B)^2$

B. $r_A = r_B(p_A/p_B)^{1/2}$

C. $r_A = (r_B \cdot p_A/p_B)^{1/2}$

D. $r_A = r_B(p_A/p_B)^{1/2}$

Answer: b

 [Watch Video Solution](#)

122. What is the ratio of diffusion rate of oxygen to hydrogen?

A. 1 : 4

B. 4 : 1

C. 1 : 8

D. 8 : 1

Answer: a

 [Watch Video Solution](#)

123. The molecular weight of a gas which diffuses through a porous plug at $1/6^{th}$ of the speed of hydrogen under identical condition is:

A. 27

B. 72

C. 36

D. 48

Answer: b

 [Watch Video Solution](#)

124. $X\text{ mL}$ of H_2 gas effuses through a hole in a container in 5 s . The time taken for the effusion of the same volume of the gas specified below, under identical conditions, is

A. 10 sec : He

B. 20 sec : O_2

C. 25 sec : CO

D. 55 sec : CO_2

Answer: b

 [Watch Video Solution](#)

125. At identical temperature and pressure the rate of diffusion of hydrogen gas is $3\sqrt{3}$ times that of a hydrocarbon having molecular formula C_nH_{2n-n} . What is the value of n ? .

A. 1

B. 4

C. 3

D. 8

Answer: b

 [Watch Video Solution](#)

126. Calculate relative rate of effusion of O_2 to CH_4 from a container containing O_2 and CH_4 in 3 :2 mass ratio.

A. $\frac{3\sqrt{2}}{4}$

B. $\frac{3}{4\sqrt{2}}$

C. $\frac{3}{2\sqrt{2}}$

D. none of these

Answer: b

 Watch Video Solution

127. Calculate relative rates of effusion of SO_2 to CH_4 in the mixture obtained by effusing out a mixture with initial molar ratio

$$\frac{n_{SO_2}}{n_{CH_4}} = \frac{8}{1} \text{ for three effusing steps.}$$

A. 2 : 1

B. 1:4

C. 1:2

D. none of these

Answer: c



Watch Video Solution

128. A gaseous mixture containing He, CH_4 and SO_2 in 1:2:3 mole ratio, calculate the molar ratio of gases effusing out initially.

A. 2:2:3

B. 6:6:1

C. $\sqrt{2}:\sqrt{2}:3$

D. 4:4:3

Answer: d

 [Watch Video Solution](#)

129. 80 mL of O_2 takes 2 minutes to pass through the hole. What volume of SO_2 will pass through the hole in 3 minute?

A. $\frac{120}{\sqrt{2}}$ mL

B. $120 \times \sqrt{2}$ mL

C. $\frac{12}{\sqrt{2}}$ mL

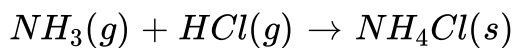
D. None of these

Answer: a

 [Watch Video Solution](#)

130. When two cotton plugs, one moistened with ammonia and the other with hydrochloric acid, are simultaneously inserted into opposite ends of a glass tube 87.0 cm long, a white ring of NH_4Cl

forms where gaseous NH_3 and gaseous HCl first come into contact.



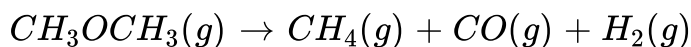
At what distance from the ammonis-moistened plug does this occur?

- A. 51.7 cm from NH_3 end
- B. 51.7 cm from HCl end
- C. 43.5 at mid point
- D. None of these

Answer: a

 [Watch Video Solution](#)

131. Dimethyl ether decomposes as



When $CH_3OCH_3(g)$ decomposes to 20% extent under certain conditions, what is the ratio of diffusion of pure $CH_3OCH_3(g)$ with methane?

A. 0.59: 1

B. 1.18: 1

C. 2.36: 1

D. 1.77: 1

Answer: c



[Watch Video Solution](#)

132. 4 gm of sulphur dioxide gas diffuses from a container in 8 min.

Mass of helium gas diffusing from the same container over the same time interval is :

A. 0.5 g

B. 1 g

C. 2 g

D. None of these

Answer: b

 [Watch Video Solution](#)

133. Under identical conditions of pressure and temperature, 4 L of gaseous mixture (H_2 and CH_4) effuses through a hole in 5 min whereas 4 L of a gas X of molecular mass 36 takes to 10 min to effuse through the same hole. The mole ratio of $H_2 : CH_4$ in the mixture is:

A. 1 : 2

B. 2 : 1

C. 2 : 3

D. 1 : 1

Answer: d

 [Watch Video Solution](#)

134. A ballon weighing 50kg is filled with 685kg of helium at 1atm pressure and 25°C . What will be its pay load if it displaced 5108kg of air ?

- A. 4373 kg
- B. 4423 kg
- C. 5793 kg
- D. none of these

Answer: a

 [Watch Video Solution](#)

135. According to the law of equipartition of energy, the energy associated with each degree of freedom is :

A. $\frac{1}{3}K_B T$

B. $\frac{1}{2}K_B T$

C. $K_B T$

D. $\frac{3}{2}K_B T$

Answer: b



Watch Video Solution

136. Calculate γ (ratio of C_p and C_v) for triatomic linear gas at high temperature. Assume that the contribution of vibrational degree of freedom is 75% :

A. 1.222

B. 1.121

C. 1.18

D. 1.33

Answer: c

 [Watch Video Solution](#)

137. If one mole each of a monoatomic and diatomic gases are mixed at low temperature then C_p/C_v ratio for the mixture is :

- A. 1.4
- B. 1.428
- C. 1.5
- D. 1.33

Answer: c

 [Watch Video Solution](#)

138. If one mole of a monatomic gas $\left(\gamma = \frac{5}{3}\right)$ is mixed with one mole of a diatomic gas $\left(\gamma = \frac{7}{5}\right)$, the value of gamma for mixture is

- A. 1.4
- B. 1.5
- C. 1.53
- D. 3.07

Answer: b

 [Watch Video Solution](#)

139. Select the correct statement :

- A. Internal energy of a real gas at a given temperature increases as the volume increases

- B. Internal energy of an ideal gas at given temperature increase as the volume increases
- C. Internal energy of an ideal gas molecules is not a function of temperature
- D. The internal energy of a real gas at a constant temperature is independent of change in volume

Answer: a

 [Watch Video Solution](#)

140. Which gas shows real behaviour?

- A. 16 g O_2 at 1 atm & 273 K occupies 11.2 L
- B. 1 g H_2 in 0.5 L flask exerts pressure of 24.63 atm at 300 K
- C. 1 mole NH_3 at 300 K and 1 atm occupies volume 22.4 L

D. 5.6 L of CO_2 at 1 atm & 273 K is equal to 11 g

Answer: c

 [Watch Video Solution](#)

141. Consider an ideal gas contained in a vessel. If the intermolecular interaction suddenly begins to act, which of the following will happen ?

- A. Pressure decreases
- B. Pressure increases
- C. Pressure remains unchanged
- D. Gas collapses

Answer: b

 [Watch Video Solution](#)

142. The pressure of real gas is less than the pressure of an ideal gas because of

- A. increase in number of collisions
- B. finite size of molecule
- C. increase in KE of molecules
- D. intermolecular forces of attraction

Answer: d



Watch Video Solution

143. A real gas behaves like an ideal gas if its

- A. high pressure and low temperature
- B. low pressure and high temperature

C. high pressure and high temperature

D. low pressure and low temperature

Answer: b



[Watch Video Solution](#)

144. If temperature and volume are same, the pressure of a gas obeying van der Waal's equation is :

A. less than that of an ideal gas

B. more than that of an ideal gas

C. same as that of an ideal gas

D. none of these

Answer: a



[Watch Video Solution](#)

145. 1 mole of each of X_1, X_2, X_3 with van der Waal's constants a (in $\text{atm } L^3 \text{mol}^{-2}$) 1.0, 3.8, 2.1 respectively is kept separately in three different vessels of equal volume at identical temperature. Their pressures are observed to $P_1, P_2,$ and P_3 respectively. On the basis of this data alone, select the correct option (neglect the effect of 'b')

:

A. $P_1 < P_2 < P_3$

B. $P_2 < P_1 < P_3$

C. $P_2 < P_3 < P_1$

D. $P_1 = P_2 = P_3$

Answer: c

 [Watch Video Solution](#)

146. A gas obeys the equation of state $P(V - b) = RT$ (The parameter b is a constant) The slope for an isochore will be .

A. negative

B. zero

C. $R/(V - b)$

D. R/P

Answer: c



Watch Video Solution

147. van der Waals constant b of helium is 24 mL mol^{-1} . Find molecular diameter of helium.

A. $1.335 \times 10^{-10} \text{ cm}$

B. $1.335 \times 10^{-8} \text{ cm}$

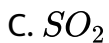
C. 2.67×10^{-8} cm

D. 4.34×10^{-8} cm

Answer: c

 [Watch Video Solution](#)

148. Which of the following can be most readily liquefied? The given value of a for NH_3 is 4.17, CO_2 is 3.59, SO_2 is 6.71, and Cl_2 is 6.49.



Answer: c

 [Watch Video Solution](#)

149. For which of the following gases should the correction for the molecular volume be largest :

CO , CO_2 , NH_3 or SF_6 ?

A. CO

B. CO_2

C. NH_3

D. SF_6

Answer: d



[Watch Video Solution](#)

150. Under which of the following sets of conditions is a real gas expected to deviate from ideal behaviour?

(I) High pressure, small volume

(II) High temperature , low pressure

(III) Low temperature, high pressure

A. only I

B. only II

C. only III

D. I and III both

Answer: d



[Watch Video Solution](#)

151. For a certain gas which deviates a little from ideal behaviour, a plot between P/p vs P was found to be non-linear . The intercept on y-axis will be :

A. $\frac{RT}{M}$

B. $\frac{M}{RT}$

C. $\frac{MZ}{RT}$

D. $\frac{R}{TM}$

Answer: a



Watch Video Solution

152. At low pressure, the van der Waal's equation become :

(a) $PV_m = RT$

(b) $P(V_m - b) = RT$

(c) $\left(P + \frac{a}{V_m^2}\right)V_m = RT$

(d) $P = \frac{RT}{V_m} + \frac{a}{V_m^2}$

A. $PV_m = RT$

B. $P(V_m - b) = RT$

C. $\left(P + \frac{a}{V_m^2}\right)V_m = RT$

D. $P = \frac{RT}{V_m} + \frac{a}{V_m^2}$

Answer: c



Watch Video Solution

153. At low pressure, if $RT = 2\sqrt{a \cdot p}$, then the volume occupied by a real gas is :

(a) $\frac{2RT}{P}$

(b) $\frac{2P}{RT}$

(c) $\frac{RT}{2P}$

(d) $\frac{2RT}{P}$

A. $\frac{2RT}{P}$

B. $\frac{2P}{RT}$

C. $\frac{RT}{2P}$

D. $\frac{2RT}{P}$

Answer: c

 [Watch Video Solution](#)

154. For a gas deviation from ideal behaviour is maximum at :

A. $0^{\circ}C$ and 1.0 atm

B. $100^{\circ}C$ and 2.0 atm

C. $-13^{\circ}C$ and 1.0 atm

D. $-13^{\circ}C$ and 2.0 atm

Answer: d

 [Watch Video Solution](#)

155. At low pressures, the van der Waals equation is written as

$$\left[P + \frac{a}{V^2} \right] V = RT$$

The compressibility factor is then equal to

A. $\left(1 - \frac{a}{RTV}\right)$

B. $\left(1 - \frac{RTV}{a}\right)$

C. $\left(1 + \frac{a}{RTV}\right)$

D. $\left(1 + \frac{RTV}{a}\right)$

Answer: a



Watch Video Solution

156. The compressibility factor for a real gas at high pressure is .

A. 1

B. $1 + \frac{Pb}{RT}$

C. $1 - \frac{Pb}{RT}$

D. $1 + \frac{RT}{Pb}$

Answer: b



Watch Video Solution

157. The compressibility of a gas is greater than unity at 1 atm and 273 K. Therefore :

A. $V_m > 22.4L$

B. $V_m < 22.4L$

C. $V_m = 22.4L$

D. $V_m = 44.8L$

Answer: a



Watch Video Solution

158. At 273K temp, and 9 atm pressure, the compressibility fog a gas is 0.9. The volume of 1 mill-moles of gas at this temperature and pressure is :

A. 2.24 litre

B. 0.020 mL

C. 2.24 mL

D. 22.4 mL

Answer: c



Watch Video Solution

159. The compressibility factor for nitrogen at $330K$ and $800atm$ is 1.90 and at $570K$ and $200atm$ is 1.10. A certain mass of N_2 occupies a volume of $1dm^3$ at $330K$ and $800atm$ calculate volume occupied by same quantity of N_2 gas at $570K$ and $200atm$

A. 1 L

B. 2 L

C. 3 L

D. 4 L

Answer: d

 [Watch Video Solution](#)

160. Consider the equation $Z = \frac{PV}{RT}$. Which of the following statements is correct?

- A. When $Z > 1$, real gases are easier to compress than the ideal gas
- B. When $Z = 1$, real gases get compressed easily
- C. When $Z > 1$, real gases are difficult to compress
- D. When $Z = 1$, ideal gases are difficult to compress

Answer: c

 [Watch Video Solution](#)

161. What is the compressibility factor (Z) for 0.02 mole of a van der Waals's gas at pressure of 0.1 atm. Assume the size of gas molecules is negligible.

Given : $RT=20 \text{ L atm mol}^{-1}$ and $a=1000 \text{ atm L}^2\text{mol}^{-2}$

A. 2

B. 1

C. 0.02

D. 0.5

Answer: d



[Watch Video Solution](#)

162. Consider the following statements If th van der Waals' parameters of two gases are given as

$a / \text{dm}^6 \text{bar mol}^{-2}$ $b / \text{dm}^3 \text{mol}^{-1}$

Gas A 6.5 0.056

Gas B 18.0 0.011

then which of the following statements is//are correct ? .

A. 1 alone

B. 1 and 2

C. 1, 2 and 3

D. 2 and 3

Answer: c



Watch Video Solution

163. The van der Waals parameters for gases W, X, Y and Z are

Gas $a (\text{atmL}^2 \text{mol}^{-2})$ $b (\text{Lmol}^{-1})$

W 4.0 0.027

X 8.0 0.030

Y 6.0 0.032

Z 12.0 0.027

Which one of these gases has the highest critical temperature?

A. W

B. X

C. Y

D. Z

Answer: d



Watch Video Solution

164. Pressure remaining the constant, the volume of a given mass of an ideal gas increases for every degree centigrade rise in temperature by definite fraction of its volume at:

A. $0^{\circ}C$

B. its critical temperature

C. absolute zero

D. its Boyle temperature

Answer: a

 [Watch Video Solution](#)

165. The critical temperature of a substance is:

 [Watch Video Solution](#)

166. The excluded volume of a gas will be larger, if $\frac{T_C}{P_C}$ is :

- A. small
- B. large
- C. equal to 1
- D. less than unity

Answer: b

 [Watch Video Solution](#)

167. Select incorrect statement :

- A. we can condense vapour simply by applying pressure
- B. to liquefy a gas one must lower the temperature below T_C and also apply pressure
- C. at T_C there is no distinction between liquid and vapour state hence density of the liquid is nearly equal to density of the vapour
- D. However great the pressure applied, a gas cannot be liquified below it's critical temp.

Answer: d

 [Watch Video Solution](#)

168. The correct order of temperature of a real gas is :

(I) Boyle's temperature

(II) Critical temperature

(III) Inversion temperature

A. $III > I > II$

B. $I > II > III$

C. $II > I > III$

D. $I > III > II$

Answer: a



[Watch Video Solution](#)

169. The temperature at which the second virial coefficient of a real gas is zero is called .

A. Critical temperature

B. Triple point

C. Boiling point

D. Boyle's temperature

Answer: d

 [Watch Video Solution](#)

170. The van der Waals' equation for one mole may be expressed as

$$V_M^3 - \left(b + \frac{RT}{P}\right)V_m^2 + \frac{aV_m}{P} - \frac{ab}{P} = 0$$

where V_m is the molar volume of the gas. Which of the following is incorrect?

A. For a temperature less than T_C , V has three real roots

B. For a temperature less than T_C , V has three imaginary roots

C. For a temperature equal to T_C all three roots of V are real and identical

D. On increasing the temp. ($T < T_C$), the three roots become closer to one another

Answer: b

 [Watch Video Solution](#)

171. For a gas obeying the van der Waals' equation, at the critical point

- A. both $\left(\frac{\partial P}{\partial V}\right)_T$ and $\left(\frac{\partial^2 P}{\partial V^2}\right)_T$ are zero
- B. only $\left(\frac{\partial^2 P}{\partial V^2}\right)_T$ is not zero
- C. $\left(\frac{\partial P}{\partial V}\right)_T$ is zero but $\left(\frac{\partial^2 P}{\partial V^2}\right)_T$ is non-zero
- D. $\left(\frac{\partial P}{\partial V}\right)_T$ is non-zero but $\left(\frac{\partial^2 P}{\partial V^2}\right)_T$ is zero

Answer: a

 [Watch Video Solution](#)

172. However great the pressure , a gas cannot be liquified above its :

- A. Boyle temperature
- B. Inversion temperature
- C. Critical temperature
- D. Room temperature

Answer: c



[Watch Video Solution](#)

173. The temperature at which real gases obey the ideal gas laws over a wide range of low pressure is called:

- (a) Critical temperature
- (b) Inversion temperature

(c) Boyle temperature

(d) Reduced temperature

A. Critical temperature

B. Inversion temperature

C. Boyle temperature

D. Reduced temperature

Answer: c



[Watch Video Solution](#)

174. Inversion temperature $\left(T_i = \frac{2a}{Rb}\right)$ is defined as the temperature above which if gas is expanded adiabatically it gets warm up but if temperature of gas is lower than T_i then it will cool down. What will

happen to gas if it is adiabatically expanded at $50^{\circ}C$ if its Boyle's temperature is $20^{\circ}C$

- A. Heating
- B. Cooling
- C. Constant
- D. None

Answer: a



[Watch Video Solution](#)

175. The van der Waals' equation of law of corresponding states for 1 mole of gas is :

A. $\left(P_r + \frac{3}{V_r^2}\right)(3V_r - 1) = 8T_r$

B. $\left(P_r - \frac{3}{V_r^2}\right)(3V_r - 1) = 8T_r$

$$C. \left(P_r + \frac{3}{V_r^2} \right) (3V_r + 1) = 8\pi T_r$$

$$D. \left(P_r + \frac{3}{V_r^2} \right) (3V_r + 1) = 8$$

Answer: a

 [Watch Video Solution](#)

176. Calculate the volume occupied by 16gram O_2 at $300K$ and $8.31Mpa$ if $\frac{P_C V_C}{RT_C} = 3/8$ and $\frac{P_r V_r}{T_r} = 2.21$ (Given $: R = 8.314MPa / K - mol$)

A. 125.31 mL

B. 124.31 mL

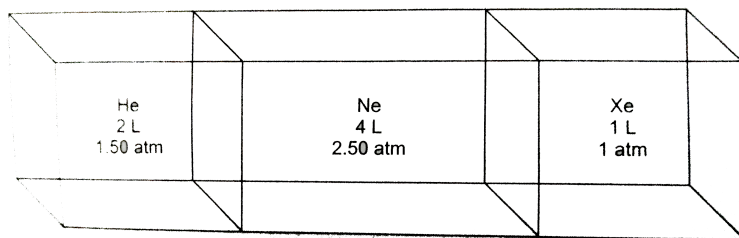
C. 248.62 mL

D. none of these

Answer: b

Level 2

1. Consider the composite system, which is held at 300 K, shown in the following figure. Assuming ideal gas behavior, calculate the total pressure if the barriers separating the compartments are removed. Assume that the volume of the barriers is negligible. (Given : $R = 0.082 \text{ atm L/mol. K}$)

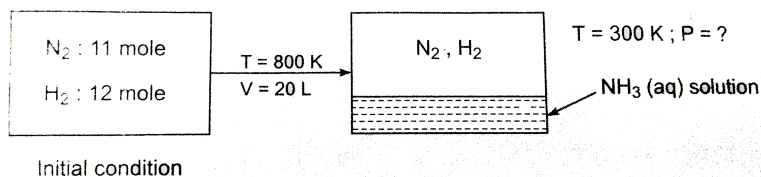


- A. 1 atm
- B. 2 atm
- C. 2.3 atm
- D. 3.2 atm

Answer: b

 Watch Video Solution

2. 11 moles of N_2 and 12 moles of H_2 mixture reacted in 2.0 litre vessel at 800 K. After equilibrium was reached, 6 mole of H_2 was present. 3.58 litre of liquid water is injected in equilibrium mixture and resultant gaseous mixture suddenly cooled to 300K. What is the final pressure of gaseous mixture? Neglect vapour pressure of liquid solution. Assume (i) all NH_3 dissolved in water (ii) no change in volume of liquid (iii) At 300 K no reaction takes place between N_2 and H_2



(a) 18.47 atm

(b) 60 atm

(c) 22.5 atm

(d) 45 atm

A. 18.47 atm

B. 60 atm

C. 22.5 atm

D. 45 atm

Answer: c

 [Watch Video Solution](#)

3. Two vessels connected by a valve of negligible volume. One container (I) has 2.8 g of N_2 at temperature $T_1(K)$. The other container (II) is completely evacuated. The container (I) is heated to $T_2(K)$ while container (II) is maintained at $T_2/3(K)$. volume of vessel (I) is half that of vessel (II). If the valve is opened then what is the mass ratio of N_2 in both vessel (W_I/W_{II})?

A. 1:2

B. 1:3

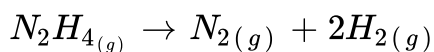
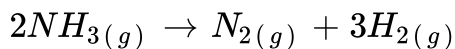
C. 1:6

D. 3:1

Answer: c

 [Watch Video Solution](#)

4. A mixture of $NH_3(g)$ and $N_2H_4(g)$ is placed in a sealed container at $300K$. The total pressure is $0.5atm$. The container is heated to $1200K$, at which time both substances decompose completely according to the equations:



After decomposition is complete, the total pressure at $1200K$ is

found to be 4.5atm . Find the amount (mole) per cent of $N_2H_4(g)$ in the original mixture.

- A. 0.2
- B. 0.25
- C. 0.5
- D. 0.75

Answer: b

 [Watch Video Solution](#)

5. Correct expression for density of an ideal gas mixture of two gases 1 and 2, where m_1 and m_2 are masses and n_1 and n_2 are moles and M_1 and M_2 are molar masses.

A. $d = \frac{(m_1 + m_2)}{(M_1 + M_2)}$

B. $d = \frac{(m_1 + m_2)}{(n_1 + n_2)} \frac{P}{RT}$

$$C. d = \frac{(n_1 + n_2)}{(m_1 + m_2)} \times \frac{P}{RT}$$

D. None of these

Answer: b

 [Watch Video Solution](#)

6. Two closed vessels of equal volume containing air at pressure P_1 and temperature T_1 are connected to each other through a narrow tube. If the temperature in one of the vessels is now maintained at T_1 and that in the other at T_2 , what will be the pressure in the vessels?

A. $\frac{T_1}{2P_1T_2}$

B. $\frac{2P_1T_2}{T_1 + T_2}$

C. $\frac{2P_1T_2}{T_1 - T_2}$

D. $\frac{2P_1}{T_1 + T_2}$

Answer: b

 [Watch Video Solution](#)

7. A balloon containing 1 mole air at 1 atm initially is filled further with air till pressure increases to 4 atm. The initial diameter of the balloon is 1 m and the pressure at each stage is proportional to diameter of the balloon. How many moles of air added to change the pressure from 1 atm to 4 atm.

- A. 80
- B. 257
- C. 255
- D. 256

Answer: c

 [Watch Video Solution](#)

8. If Pd vs. P (where P denotes pressure in atm and d denotes density in gm/L) is plotted for He gas (assume ideal) at a particular temperature. If $\left[\frac{d}{dP}(Pd) \right]_{P=8.21\text{atm}} = 5$, then the temperature will be

- A. 160 K
- B. 320 K
- C. 80 K
- D. none of these

Answer: a

 [Watch Video Solution](#)

9. What is the density of wet air with 75% relative humidity at 1 atm and 300 K? Given : vapour pressure of H_2O is 30 torr and average

molar mass of air is 29 g mol^{-1} .

A. 1.614 g/L

B. 0.96 g/L

C. 1.06 g/L

D. 1.164 g/L

Answer: d

 [Watch Video Solution](#)

10. 7 moles of a tetra-atomic non-linear gas 'A' at 10 atm and $T \text{ K}$ are mixed with 6 moles of another gas B at $\frac{T}{3} \text{ K}$ and 5 atm in a closed, rigid vessel without energy transfer with surroundings. If final temperature of mixture was $\frac{5T}{6} \text{ K}$, then gas B is ? (Assuming all modes of energy are active)

A. monoatomic

B. diatomic

C. triatomic

D. tetra atomic

Answer: b

 [Watch Video Solution](#)

11. Three closed rigid vessels, A, B and C, which initially contain three different gases at different temperatures are connected by tube of negligible volume, without any energy transfer with surroundings. The vessel A contain 2 mole Ne gas, at 300 K, vessel 'B' contain 2 mole SO_2 gas at 400 K and vessel 'C' contain 3 mole CO_2 gas at temperature 500 K. What is the final pressure (in atm) attained by gases when all valves of connecting three vessels are opened and additional 15.6 kcal heat supplied to vessels through valve. The volume of A, B and C vessel is 2, 2 and 3 litre respectively

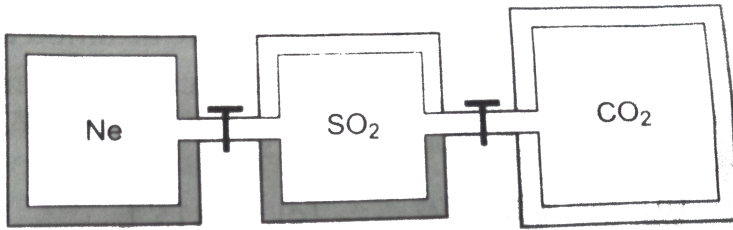
Given

$:R$

$=2$

calorie/mol-K,

$$C_v(Ne) = 3/2R, C_v(CO) = 5/2R \text{ and } C_v(SO_2) = 3R$$



A. 73.89 atm

B. 67.31 atm

C. 80 atm

D. none of these

Answer: a

 [Watch Video Solution](#)

12. Gas molecules each of mass 10^{-26} kg are taken in a container of volume $1dm^3$. The root mean square speed of gas molecules is 1 km sec^{-1} . What is the temperature of gas molecules.

(Given : $N_A = 6 \times 10^{23}$, $R = 8J/mol.K$)

- A. 298 K
- B. 25 K
- C. 250 K
- D. 2500 K

Answer: c



[Watch Video Solution](#)

13. A balloon of diameter 21 meter weight 100 kg. Calculate its payload, if it is filled with He at 1.0 atm and $27^\circ C$. Density of air is $1.2\text{ kg } m^{-3}$. (Given : $R=0.082\text{ L atm } K^{-1}mol^{-1}$)

A. 4952.42 kg

B. 4932.42 kg

C. 493.242 kg

D. none of these

Answer: b



Watch Video Solution

14. A given volume of ozonised oxygen (containing 60% oxygen by volume) required 220 sec to effuse while an equal volume of oxygen took 200 sec only under identical conditions. If density of O_2 is 1.6 g/L then find density of O_3 .

A. 1.963 g/L

B. 2.16 g/L

C. 3.28 g/L

D. 2.24 g/L

Answer: d

 [Watch Video Solution](#)

15. If 250 mL of N_2 over water at $30^\circ C$ and a total pressure of 740 torr is mixed with 300 mL of Ne over water at $25^\circ C$ and a total pressure of 780 torr, what will be the total pressure if the mixture is in a 500 mL vessel over water at $35^\circ C$.

(Given : Vapour pressure (Aqueous tension) of H_2O at $25^\circ C$, $30^\circ C$ and $35^\circ C$ are 23.8, 31.8 and 42.2 torr respectively. Assume volume of $H_2O(l)$ is negligible in final vessel)

- A. 760 torr
- B. 828.4 torr
- C. 807.6 torr

D. 870.6 torr

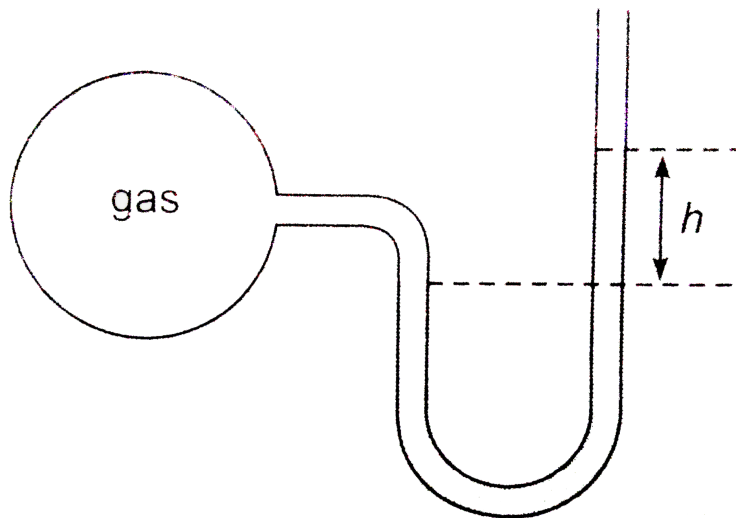
Answer: d

 [Watch Video Solution](#)

16. A bulb of constant volume is attached to a manometer tube open at other end as shown in figure. The manometer is filled with a liquid of density $(1/3)^{\text{rd}}$ that of mercury. Initially h was 228 cm.

Through a small hole in the bulb gas leaked assuming pressure decreases as $\frac{dP}{dt} = -kp$. If value of h is 114 cm after 14 minutes, what is the value of k (in hour^{-1})?

[Use : $\ln(4/3) = 0.28$ and density of Hg = 13.6 g/mL.]



- A. 0.6
- B. 1.2
- C. 2.4
- D. none of these

Answer: b

 [Watch Video Solution](#)

17. A mixture of nitrogen and water vapours is admitted to a flask at 760 torr which contains a sufficient solid drying agent. After long time the pressure attained a steady value of 722 torr.

If the experiment is done at $27^{\circ}C$ and drying agent increase in mass by 0.9 gm, what is the volume of the flask? Neglect any possible vapour pressure of drying agent and volume occupied by drying agent.

A. 443.34 L

B. 246.3 L

C. 12.315 L

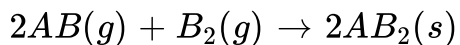
D. 24.63 L

Answer: d

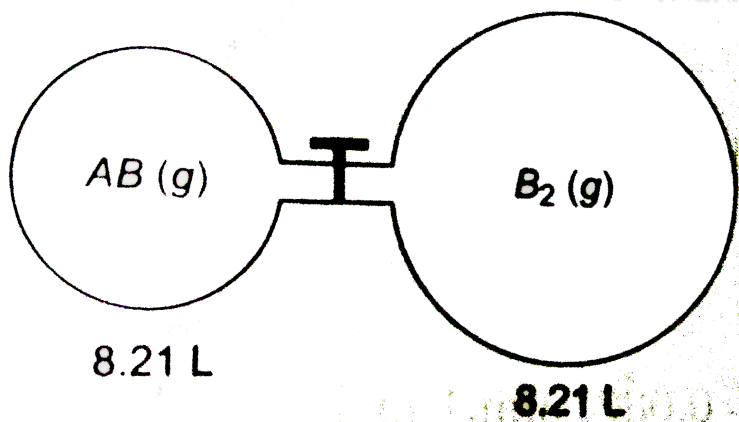


Watch Video Solution

18. At room temperature following reaction goes to completion



AB_2 is solid with negligible vapour pressure below $0^\circ C$. At 300 K, the AB in the smaller flask exerts a pressure of 3 atm and in the larger flask B_2 exerts a pressure of 1 atm at 400 K when they are separated out by a close valve, The gases are mixed by opening the stop cock and after the end of the reaction the flask are cooled to 250 K



The final pressure is :

A. 0.156 atm

B. 0.3125 atm

C. 0.625 atm

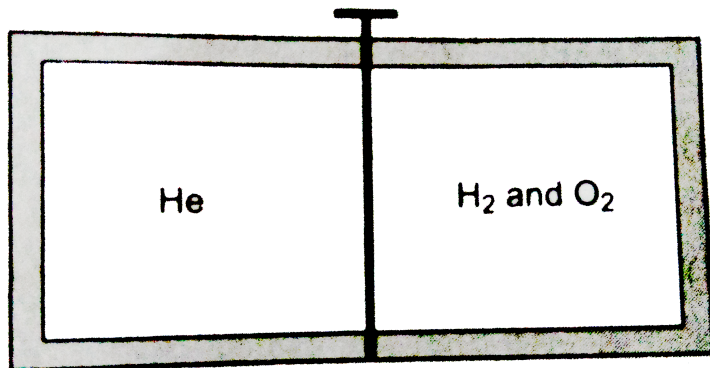
D. 3.2 atm

Answer: c

 [Watch Video Solution](#)

19. A vessel of uniform cross-section of length 500 cm as shown in figure is divided in two parts by a weightless and frictionless piston one part contains 5 moles of $\text{He}(g)$ and other part 2 moles of $\text{H}_2(g)$ and 4 moles of $\text{O}_2(g)$ added at the same temperature and pressure in which reaction takes place finally vessel cooled to 300 K and 1 atm. What is the length of He compartment?

(Assume volume of piston and vol. of $H_2O(l)$ formed are negligible)



At initial stage

- A. 187.5 cm
- B. 300 cm
- C. 312.5 cm
- D. none of these

Answer: c

 Watch Video Solution

20. For a real gas (mol.mass =60) if density at critical point is $0.80g/cm^{-3}$ and its $T_c = \frac{4 \times 10^5}{821} K$, then van der Waals' constant a (in atm L^2mol^{-2}) is

A. 0.3375

B. 3.375

C. 1.68

D. 0.025

Answer: b

 Watch Video Solution

21. The van der Waals' constant 'b' of a gas is $4\pi \times 10^{-4} L/mol$.

How near can the centers of the two molecules approach each other? [Use : $N_A = 6 \times 10^{23}$]

A. 10^{-7} m

B. 10^{-10} m

C. 5×10^{-11} m

D. 5×10^{-9} m

Answer: b



Watch Video Solution

22. The density of vapour of a substance (X) at 1 atm pressure and 500 K is 0.8 kg/m^3 . The vapour effuse through a small hole at a rate of $4/5$ times slower than oxygen under the same condition. What is the compressibility factor (z) of the vapour ?

A. 0.974

B. 1.35

C. 1.52

Answer: c **Watch Video Solution**

23. van der Waal's gas equation can be reduced to virial equation and virial equation (in terms of volume) is

$$Z = A + \frac{B}{V_m} + \frac{C}{V_m^2} + \dots\dots\dots$$

where A =first virial coefficient, B=second virial coefficient ,C = third virial coefficient. The third virial coefficient of Hg(g) is $625 \text{ (cm}^2 / \text{mol)}^2$. What volume is available for movement of 10 moles He(g) atoms present in 50 L vessel?

A. 49.75 L

B. 49.25 L

C. 25 L

D. 50 L

Answer: a

 [Watch Video Solution](#)

24. If the slope of 'Z' (compressibility factor) vs. 'p' curve is constant (slope = $\frac{\pi}{492.6} atm^{-1}$) at a particular temperature (300 K) and very high pressure, then calculate diameter of the molecules.

(Given : $N_A = 6.0 \times 10^{23}$, $R = 0.0821 atm \cdot L mol^{-1} K^{-1}$)

A. 7.5 Å

B. 5 Å

C. 2.5 Å

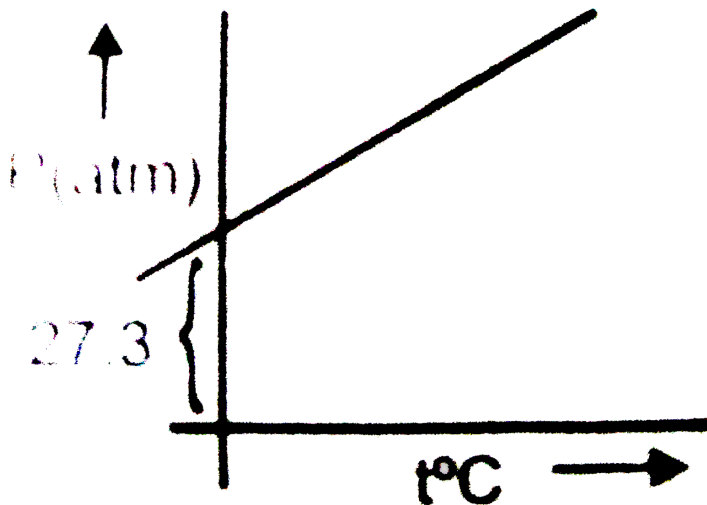
D. 1.25 Å

Answer: b

 [Watch Video Solution](#)

25. A graph is plotted between p (atm) vs $t^{\circ}C$ for 10 mol of an ideal gas as follows:

Then slope of curve and volume of container (L) respectively, are:



A. 0.1,8.21

B. 8.21,0.1

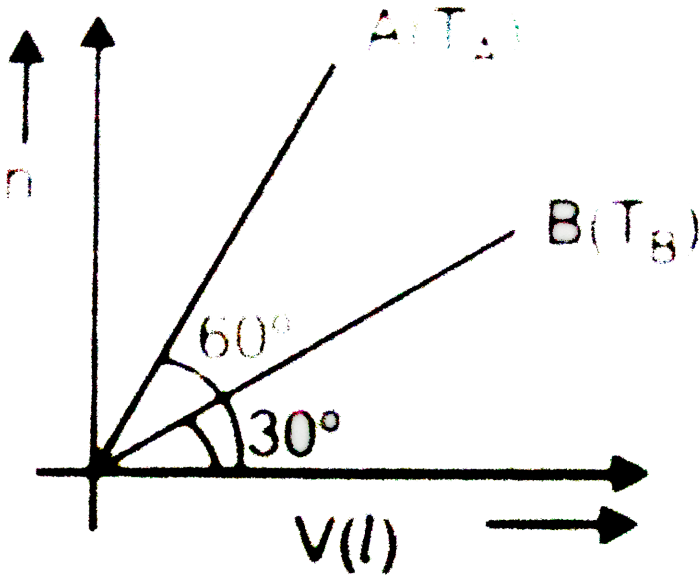
C. 27.3,8.21

D. 8.21,27.3

Answer: a

 Watch Video Solution

26. For two samples of ideal gases A and B curves are plotted n vs V (volume of container) at 16.42 atm pressure. Then temperature of A and B respectively are:



(a) $\frac{200}{\sqrt{3}} K, 200\sqrt{3} K$

(b) $\frac{200}{\sqrt{3}} ^\circ C, (200\sqrt{3}) ^\circ C$

(c) $200\sqrt{3}K, \frac{200}{\sqrt{3}}K$

(d) $200K, \frac{\sqrt{3}}{200}K$

A. $\frac{200}{\sqrt{3}}K, 200\sqrt{3}K$

B. $\frac{200}{\sqrt{3}}\text{ }^{\circ}C, (200\sqrt{3})\text{ }^{\circ}C$

C. $200\sqrt{3}K, \frac{200}{\sqrt{3}}K$

D. $200K, \frac{\sqrt{3}}{200}K$

Answer: a



Watch Video Solution

27. At a constant temperature what should be the percentage increase in pressure for a 10 % decrease in the volume of gas ?

(a) 11 %

(b) 20 %

(c) 5 %

(d) 50 %

A. 11 %

B. 20 %

C. 5 %

D. 50 %

Answer: a

 [Watch Video Solution](#)

28. 6 litre H_2O is placed in a closed evacuated room of volume 8.27 litre at the temperature 300K. The density of liquid water at 300 K is 1.0 gm/ml. the vapour pressure of water at 300 K is 22.8 mm Hg.

Neglect the change in volume of liquid water by vaporization.

List I

- (P) Mass of water vapour formed (in gm)
(Q) Moles of water vapour formed
(R) Approx. mass of liquid water left (in kg)
(S) Total moles of atoms in vapour form

List II

- (1) 6
(2) 18
(3) 3
(4) 1

A. $\begin{matrix} P & Q & R & S \\ 1 & 2 & 4 & 3 \end{matrix}$

B. $\begin{matrix} P & Q & R & S \\ 4 & 3 & 2 & 1 \end{matrix}$

C. $\begin{matrix} P & Q & R & S \\ 2 & 4 & 1 & 3 \end{matrix}$

D. $\begin{matrix} P & Q & R & S \\ 1 & 2 & 3 & 4 \end{matrix}$

Answer: c



Watch Video Solution

29. Match the items of columns I and II.

Column-I		Column-II	
(P)	Z for ideal gas behaviour	(1)	$3/8$
(Q)	Z for real gas at low pressure	(2)	$\left(1 + \frac{Pb}{RT}\right)$
(R)	Z for real gas at high pressure	(3)	1
(S)	Z for critical state	(4)	$\left(1 - \frac{a}{RTV}\right)$

A. $P \quad Q \quad R \quad S$
1 2 4 3

B. $P \quad Q \quad R \quad S$
3 4 2 1

C. $P \quad Q \quad R \quad S$
2 1 4 3

D. $P \quad Q \quad R \quad S$
1 2 3 4

Answer: b



Watch Video Solution

30. Match the following columns

List-I (Conditions for real gas)		List-II	
(P)	If force of attraction among gas particles are negligible	(1)	$PV_m = RT$
(Q)	At 1 atm and 273 K	(2)	$PV_m = RT - \frac{a}{V_m}$
(R)	If the volume of gas particles is negligible	(3)	$\left(P + \frac{a}{V_m^2}\right)(V_m - b) = RT$
(S)	At low pressure and high temperature	(4)	$PV_m = RT + Pb$

A. $P \quad Q \quad R \quad S$
 4 1 3 2

B. $P \quad Q \quad R \quad S$
 4 3 2 1

C. $P \quad Q \quad R \quad S$
 2 1 4 3

D. $P \quad Q \quad R \quad S$
 1 2 3 4

Answer: b

 Watch Video Solution

1. van der Waal's equation for calculating the pressure of a non ideal gas is

$$\left(P + \frac{an^2}{V^2}\right)(V - nb) = nRT$$

van der Waal's suggested that the pressure exerted by an ideal gas , P_{ideal} , is related to the experiventially measured pressure, P_{ideal} by the equation

$$P_{\text{ideal}} = \underset{\substack{\uparrow \\ \text{observed pressure}}}{P_{\text{real}}} + \underset{\substack{\uparrow \\ \text{currection term}}}{\frac{an^2}{V^2}}$$

Constant 'a' is measure of intermolecular interaction between gaseous molecules that gives rise to nonideal behavior. It depends upon how frequently any two molecules approach each other closely. Another correction concerns the volume occupied by the gas molecules. In the ideal gas equation, V represents the volume of the container. However, each molecule does occupy a finite, although small, intrinsic volume, so the effective volume of the gas vecomes $(V-nb)$, where n is the number of moles of the gas and b is a constant. The term nb represents the volume occupied by gas

particles present in n moles of the gas .

Having taken into account the corrections for pressure and volume, we can rewrite the ideal gas equation as follows :

$$\left(P + \frac{an^2}{V^2} \right) (V - nb) = nRT$$

corrected pressure corrected volume

AT relatively high pressures, the van der Waals' equation of state reduces to

A. $PV = RT - a/V_m$

B. $PV = aRT/V_m^2$

C. $P = RT - a/V_m^2$

D. $PV_m = RT + Pb$

Answer: d



Watch Video Solution

2. For non-zero value of force of attraction between gas molecular at large volume, gas equation will be :

(a) $PV = nRT - \frac{n^2a}{V}$

(b) $PV = nRT + nbP$

(c) $P = \frac{nRT}{V - b}$

(d) $PV = nRT$

A. $PV = nRT - \frac{n^2a}{V}$

B. $PV = nRT + nbP$

C. $P = \frac{nRT}{V - b}$

D. $PV = nRT$

Answer: a



Watch Video Solution

3. The van der Waals' constant 'a' for CO_2 gas is greater than that of H_2 gas. Its mean that the

A. strength of van der Waals' force of CO_2 gas is less than that of H_2 gas

B. strength of van der Waals' force of CO_2 gas is equal to that of H_2 gas

C. CO_2 gas can be more easily liquified

D. H_2 gas can be more easily liquified

Answer: c



[Watch Video Solution](#)

4. Using van der Waals' equation, find the constant 'a' (in $\text{atm L}^2\text{mol}^{-2}$) when two moles of a gas confined in 4 L flask exerts a

pressure of 11.0 atmospheres at a temperature of 300 K. The value of

b is 0.05 L mol^{-1} . ($R = 0.082 \text{ atm.L/K mol}$)

A. 2.62

B. 2.64

C. 6.24

D. 6.46

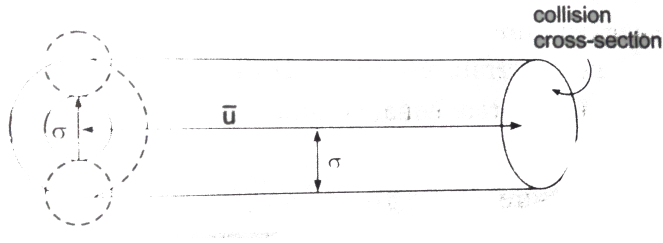
Answer: d

 [Watch Video Solution](#)

Level 3 Passage 2

1. Collision cross-section is an area of an imaginary sphere of radius σ around the molecule within which the centre of another molecule cannot penetrate.

The volume swept by a single molecule in unit time is



$$V = (\pi\sigma^2)\bar{u} \text{ where } \bar{u} \text{ is the average speed}$$

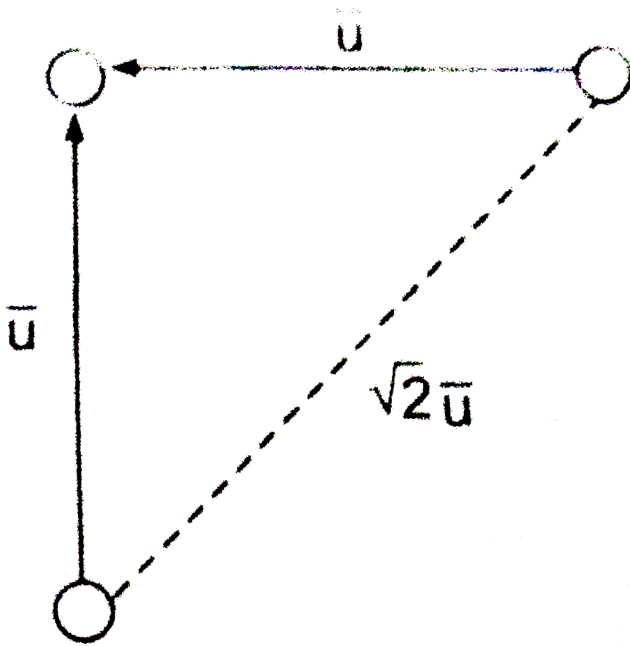
If N^* is the number of molecules per unit volume, then the number of molecules within the volume V is

$$N = VN^* = (\pi\sigma^2\bar{u})N^*$$

Hence, the number of collision made by a single molecule in unit time will be

$$Z = N = (\pi\sigma^2\bar{u})N^*$$

In order to account for the movements of all molecules, we must consider the average velocity along the line of centres of two colliding molecules instead of the average velocity of a single molecule . If it is assumed that, on an average, molecules collide while approaching each other perpendicularly, then the average velocity along their centres is $\sqrt{2}\bar{u}$ as shown below.



Number of collision made by a single molecule with other molecule per unit time is given by

$$Z_1 = \pi\sigma^2(\bar{u}_{\text{rel}})N^* = \sqrt{2}\pi\sigma^2\bar{u}N^*$$

The total number of bimolecular collisions Z_{11} per unit volume per unit time is given by

$$Z_{11} = \frac{1}{2}(Z_1N^*) \text{ or } Z_{11} = \frac{1}{2}(\sqrt{2}\pi\sigma^2\bar{u}N^*)N^* = \frac{1}{\sqrt{2}}\pi\sigma^2\bar{u}N^{*2}$$

If the collision involve two unlike molecules then the number of collisions Z_{12} per unit volume per unit time is given as

$$Z_{12} = \pi \sigma_{12}^2 \left(\sqrt{\frac{8kT}{\pi \mu}} \right) N_1 N_2$$

where N_1 and N_2 are the number of molecules per unit volume of the two types of molecules, σ_{12} is the average diameter of the two molecules and μ is the reduced mass. The mean free path is the average distance travelled by a molecule between two successive collisions. We can express it as follows :

$$\lambda = \frac{\text{Average distance travelled per unit time}}{\text{NO. of collisions made by a single molecule per unit time}} = \frac{\bar{u}}{Z_1}$$

or $\lambda = \frac{\bar{u}}{\sqrt{2}\pi\sigma^2\bar{u}N^*} \Rightarrow \frac{1}{\sqrt{2}\pi\sigma^2\bar{u}N^*}$

For a given gas the mean free path at a particular pressure is :

- A. independent to temperature
- B. decreases with rise in temperature
- C. increases with rise in temperature
- D. directly proportional to T^2

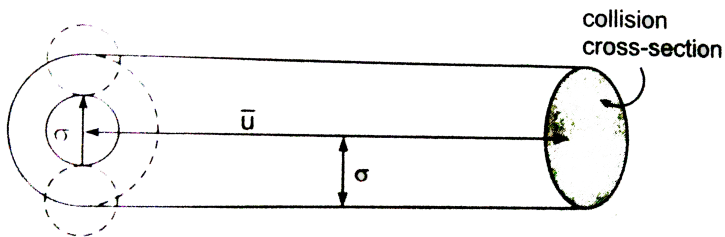
Answer: c



Watch Video Solution

2. Collision cross-section is an area of an imaginary sphere of radius σ around the molecule within which the centre of another molecule cannot penetrate.

The volume swept by a single molecule in unit time is



$V = (\pi\sigma^2)\bar{u}$ where \bar{u} is the average speed

If N^* is the number of molecules per unit volume, then the number of molecules within the volume V is

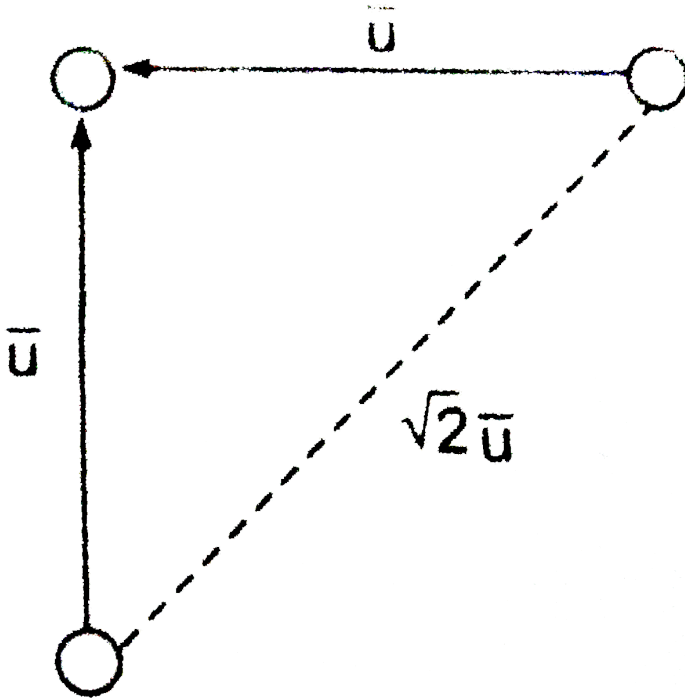
$$N = VN^* = (\pi\sigma^2\bar{u})N^*$$

Hence, the number of collision made by a single molecule in unit time will be

$$Z = N = (\pi\sigma^2\bar{u})N^*$$

In order to account for the movements of all molecules, we must consider the average velocity along the line of centres of two

colliding molecules instead of the average velocity of a single molecule . If it is assumed that, on an average, molecules collide while approaching each other perpendicularly, then the average velocity along their centres is $\sqrt{2}\bar{u}$ as shown below.



Number of collision made by a single molecule with other molecule per unit time is given by

$$Z_1 = \pi\sigma^2(\bar{u}_{\text{rel}})N^* = \sqrt{2}\pi\sigma^2\bar{u}N^*$$

The total number of bimolecular collisions Z_{11} per unit volume per

unit time is given by

$$Z_{11} = \frac{1}{2}(Z_1 N^*) \text{ or } Z_{11} = \frac{1}{2}(\sqrt{2}\pi\sigma^2 \bar{u} N^*) N^* = \frac{1}{\sqrt{2}}\pi\sigma^2 \bar{u} N^{*2}$$

If the collision involve two unlike molecules then the number of collisions Z_{12} per unit volume per unit time is given as

$$Z_{12} = \pi\sigma_{12}^2 \left(\sqrt{\frac{8kT}{\pi\mu}} \right) N_1 N_2$$

where N_1 and N_2 are the number of molecules per unit volume of the two types of molecules, σ_{12} is the average diameter of the two molecules and μ is the reduced mass. The mean free path is the average distance travelled by a molecule between two successive collisions. We can express it as follows :

$$\lambda = \frac{\text{Average distance travelled per unit time}}{\text{NO. of collisions made by a single molecule per unit time}} = \frac{\bar{u}}{Z_1}$$

or

$$\lambda = \frac{\bar{u}}{\sqrt{2}\pi\sigma^2 \bar{u} N^*} \Rightarrow \frac{1}{\sqrt{2}\pi\sigma^2 \bar{u} N^*}$$

Three ideal gas samples in separate equal volume containers are taken and following data is given :

	Pressure	Temperature	Mean free paths	Mol. wt.
Gas A	1atm	1600K	0.16nm	20
Gas B	2atm	200K	0.16nm	40
Gas C	4atm	400K	0.04nm	80

Calculate ratio of collision frequencies (Z_{11})($A : B : C$) of following for the three gases.

A. 1 : 2 : 4

B. 4 : 2 : 1

C. 1 : 4 : 16

D. 16 : 4 : 1

Answer: c



[Watch Video Solution](#)

3. Three ideal gas samples in separate equal volume containers are taken and following data is given :

	Pressure	Temperature	Mean free paths	Mol. wt.
Gas A	1atm	1600K	0.16nm	20
Gas B	2atm	200K	0.16nm	40
Gas C	4atm	400K	0.04nm	80

Calculate number of collision by one molecule per sec (Z_1).

(a) 4 : 1 : 4

(b) 1 : 4 : 4

(c) 4 : 3 : 2

(d) 1 : 2 : 4

A. 4 : 1 : 4

B. 1 : 4 : 4

C. 4 : 3 : 2

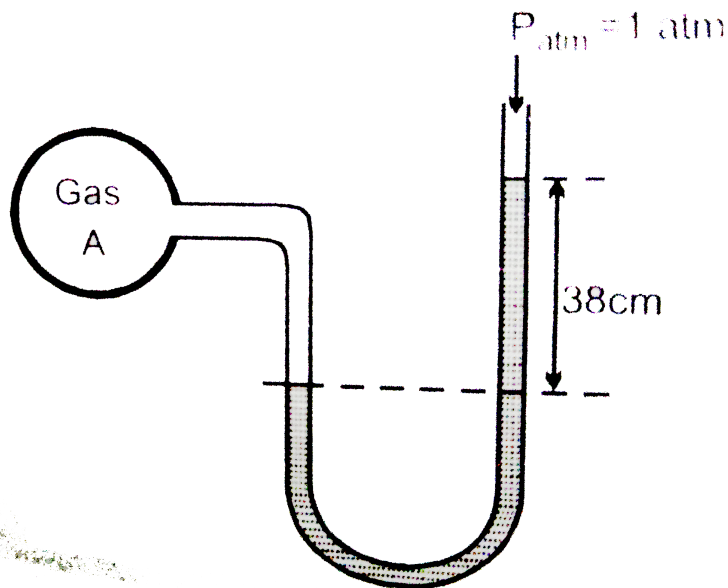
D. 1 : 2 : 4

Answer: a



Watch Video Solution

4. A manometer contains a liquid of density 5.44 g/cm^3 is attached to a flask containing gas 'A' as follows



If the same liquid is used in barometer to measure the atmospheric pressure, then what will be the length of the liquid column, which exerts pressure equal to 1 atm ? (density of Hg = $13.6g/cm^3$)

- A. 190 cm
- B. 76 cm
- C. 30.4 cm
- D. 266 cm



Watch Video Solution

5. Three ideal gas samples in separate equal volume containers are taken and following data is given :

	Pressure	Temperature	Mean free paths	Mol.wt.
Gas A	1atm	1600K	0.16nm	20
Gas B	2atm	200K	0.16nm	40
Gas C	4atm	400K	0.04nm	80

Calculate number of collision by one molecule per sec (Z_1).

(a) 4 : 1 : 4

(b) 1 : 4 : 4

(c) 4 : 3 : 2

(d) 1 : 2 : 4

A. 4 : 1 : 4

B. 1 : 4 : 4

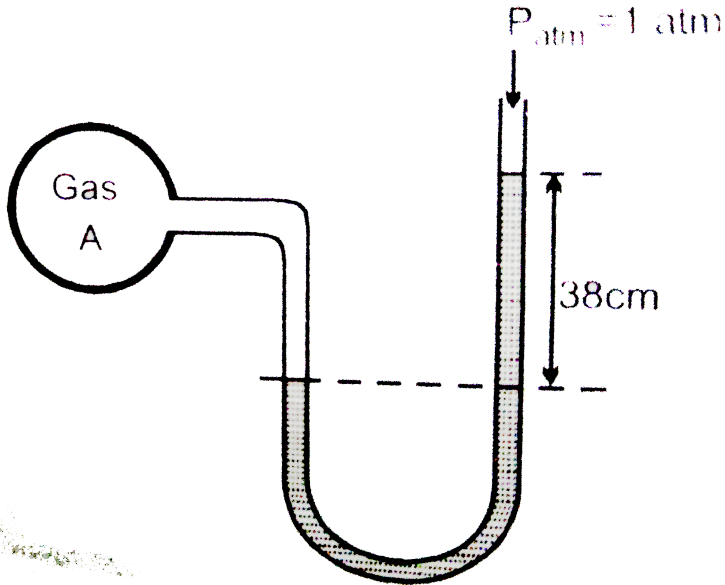
C. 4 : 3 : 2

D. 1 : 2 : 4

Answer: a

[Watch Video Solution](#)

6. A manometer contains a liquid of density $5.44\text{g}/\text{cm}^3$ is attached to a flask containing gas 'A' as follows



If the same liquid is used in barometer to measure the atmospheric pressure, then what will be the length of the liquid column which exerts pressure equal to 1 atm ? (density of $Hg = 13.6\text{g}/\text{cm}^3$)

A. 190 cm

B. 76 cm

C. 30.4 cm

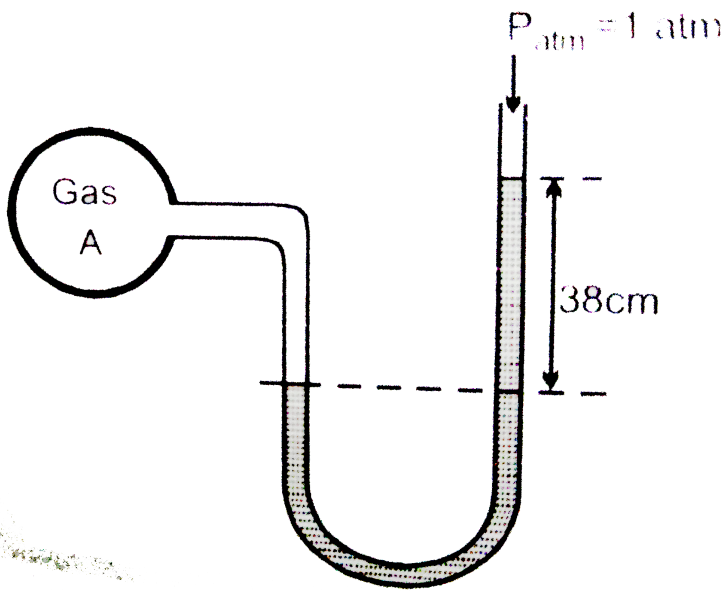
D. 266 cm



Watch Video Solution

Level 3 Passage 3

1. A monometer contains a liquid of density $5.44\text{g}/\text{cm}^3$ is attached to a flask containing gas 'A' as follows

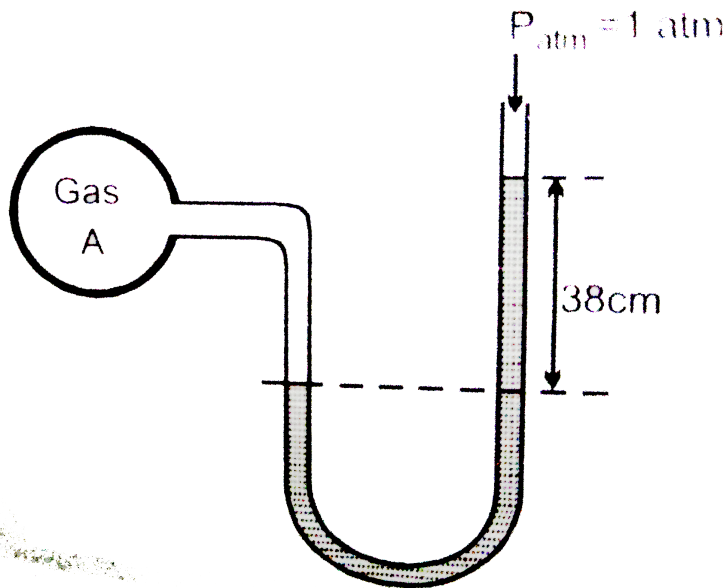


If the same liquid is used in barometer to measure the atmospheric pressure, then what will be the length of the liquid column, which exerts pressure equal to 1 atm ? (density of Hg = $13.6g/cm^3$)

- A. 190 cm
- B. 76 cm
- C. 30.4 cm
- D. 266 cm

Answer: a

2. A manometer contains a liquid of density 5.44g/cm^3 is attached to a flask containing gas 'A' as follows



If the same liquid is used in barometer to measure the atmospheric pressure, then what will be the length of the liquid column which exerts pressure equal to 1 atm ? (density of $Hg = 13.6\text{g/cm}^3$)

A. 190 cm

B. 76 cm

C. 30.4 cm

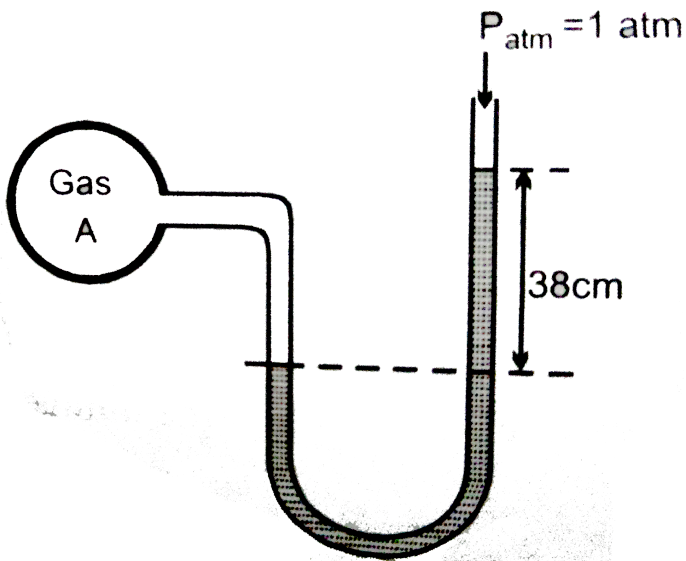
D. 266 cm

Answer: a



Watch Video Solution

3. A monometer contains a liquid of density $5.44\text{g}/\text{cm}^3$ is attached to a flask containing gas 'A' as follows



The initial pressure of gas A in th flask is:

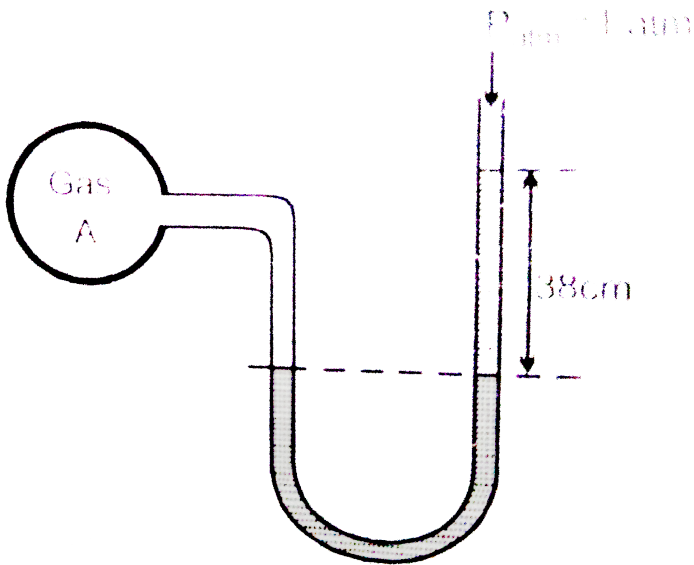
- A. 1.5 atm
- B. 1 atm
- C. 1.3 atm
- D. 1.2 atm

Answer: d



Watch Video Solution

4. A manometer contains a liquid of density 5.44g/cm^3 is attached to a flask containing gas 'A' as given. If gas A undergoes 30% trimerisation $[3A(g) \rightleftharpoons A_3(g)]$ then the difference in height of the liquid level in two columns is?



- (a) 38cm
- (b) 7.6cm
- (c) 3.04cm
- (d) 15.1cm

A. 38 cm

B. 7.6 cm

C. 3.04 cm

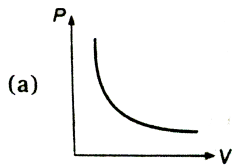
D. 15.1 cm

Answer: b

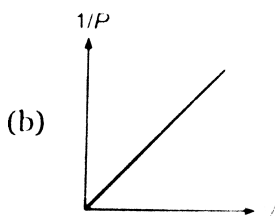
 [Watch Video Solution](#)

One or More Answers is/are Correct

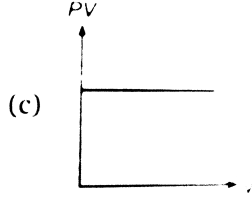
1. Which of the following curves represent(s) Boyle's law?



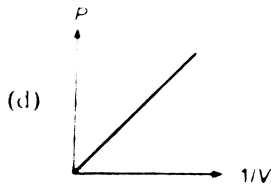
A.



B.



C.



D.

Answer: a,b,c,d

 [Watch Video Solution](#)

2. If a gas expands at constant temperature

- A. the pressure decreases
- B. the kinetic energy of the molecules remains the same
- C. the K.E. of the molecules decrease
- D. the number of molecules of the gas increase

Answer: a,b



Watch Video Solution

3. Which of the following statements are correct ?

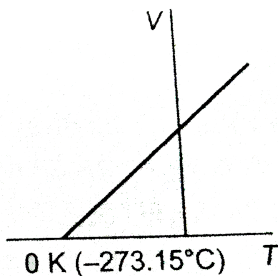
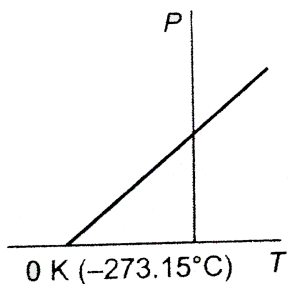
- A. It is not possible to compress a gas at a temperature below T_C
- B. At a temperature below T_C the molecules are close enough for the attractive forces to act, and condensation occurs
- C. No condensation takes place above T_C
- D. Due to higher kinetic energy of the gas molecules above T_C , it is considered as super critical fluid

Answer: b,c,d



Watch Video Solution

4. What conclusion would you draw from the following graphs for an ideal gas?



- A. As the temperature is reduced, the volume as well as the pressure increase
- B. As the temperature is reduced, the volume becomes zero and the pressure reaches infinity
- C. As the temperature is reduced, the pressure decrease
- D. A point is reached where, theoretically, the volume become zero

Answer: c,d



Watch Video Solution

5. Which of the following is a character of a gas at Boyle temperature?

A. the effects of the repulsive and attractive intermolecular forces just offset each other

B. the repulsive intermolecular forces are stronger than the attractive intermolecular forces

C. the repulsive intermolecular forces are weaker than the attractive intermolecular forces

D. $b - \frac{a}{RT} > 0$

Answer: a



Watch Video Solution

6. Indicate the correct statement for equal volumes of $N_2(g)$ and $CO_2(g)$ at $25^\circ C$ and 1 atm.

- A. The average translational K.E. per molecule is the same for N_2 and CO_2
- B. The rms speed is same for both N_2 and CO_2
- C. The density of N_2 is less than that of CO_2
- D. The total translational K.E. of both N_2 and CO_2 is the same

Answer: a,c,d

 [Watch Video Solution](#)

7. Which of the following is correct for critical temperature ?

- A. It is the highest temperature at which liquid and vapour can coexist

- B. Beyond this temperature, there is no distinction between the two phases and a gas cannot be liquefied by compression.
- C. At this temperature, the gas the liquid phases have different critical densities
- D. All are correct

Answer: a,b

 [Watch Video Solution](#)

8. Consider the following statement regarding Maxwell's distribution of speeds. The correct statement(s) is/are :

- A. as temperature increases, the peak (maxima) of a curve is shifted towards right side

B. as temperature increases, the most probable speed of molecules increases but fraction of molecules of maximum speed decreases

C. the area under the curve at all the temperatures is the same because it represents the number of gaseous molecules

D. the fractions of molecules having different speeds are different at a given temperature

Answer: a,b,c,d



Watch Video Solution

9. If a gas expands at a constant pressure by providing heat :

A. the temperature increases

B. the kinetic energy of the gaseous molecules remains same

C. the kinetic energy of gaseous molecules decreases

D. the number of molecules of the gas decreases

Answer: a

 [Watch Video Solution](#)

10. Select the incorrect statement(s) :

A. The product of pressure and volume of fixed amount of a gas is independent of temperature.

B. The value of universal gas constant depends upon temperature, volume and number of gaseous molecules

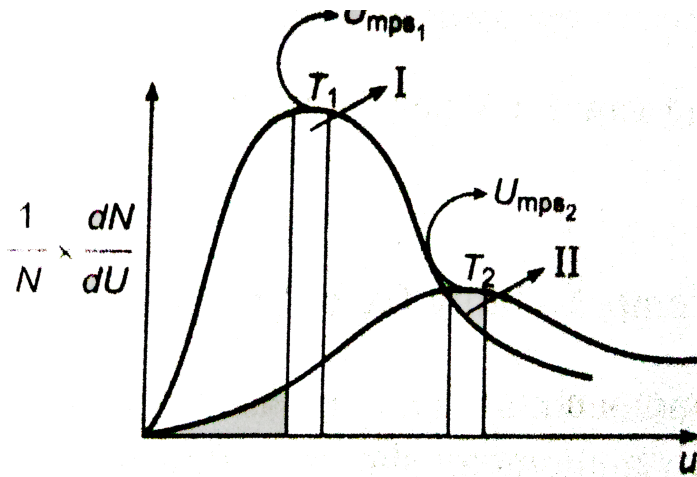
C. The gas constant also known as Boltzmann's constant

D. The average kinetic energy of molecules depends only on temperature

Answer: a,b,c

 Watch Video Solution

11. Following represents the Maxwell distribution curve for an ideal gas at two temperature T_1 and T_2 . Which of the following option(s) is/are true?



A. Total area under the two curves is independent to moles of gas

B. u_{mp} decrease as temperature decreases

C. $T_1 > T_2$ and hence higher the temperature, sharper the curve

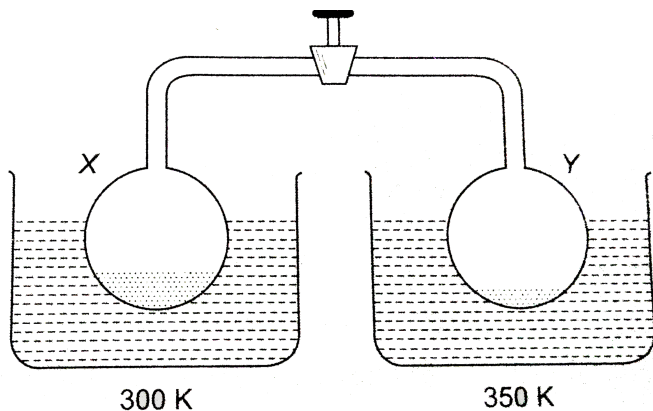
D. The fraction of molecules having speed u_{mp} decreases as temperature increases

Answer: a,b,d

 Watch Video Solution

12. Two container each containing liquid water are connected as shown in diagram.

Given that vapour pressure of $H_2O(l)$ at 300 K and 350 K are 22 torr and 40 torr, select correct statement(s) :



- A. The final pressure in each container if valve is opened while keeping the containers at the given temperature is 22 torr
- B. The final pressure in each container if valve is opened while keeping the containers at the given temperature is 40 torr
- C. Mass of $H_2O(l)$ is decreased in container X
- D. Mass of $H_2O(l)$ is decreased in container Y

Answer: a,d

 [Watch Video Solution](#)

13. Select the correct statement(s) :

- A. At Boyle's temperature a real gas behaves like an ideal gas at low pressure
- B. Above critical conditions, a real gas behave like an ideal gas

C. For hydrogen gas 'b' dominates over 'a' at all temperatures

D. At high pressure van der Waals' constant 'b' dominates over 'a'

Answer: a,b,d

 [Watch Video Solution](#)

14. Select the correct statement :

A. The value of compressibility factor 'Z' for H_2 gas is greater than one at room

B. The real gas behaves as an ideal gas at Boyle's temperature.

C. For a real gas following van der Waals' equation of state, the expression of critical temperature is $\frac{8a}{27R \cdot b}$

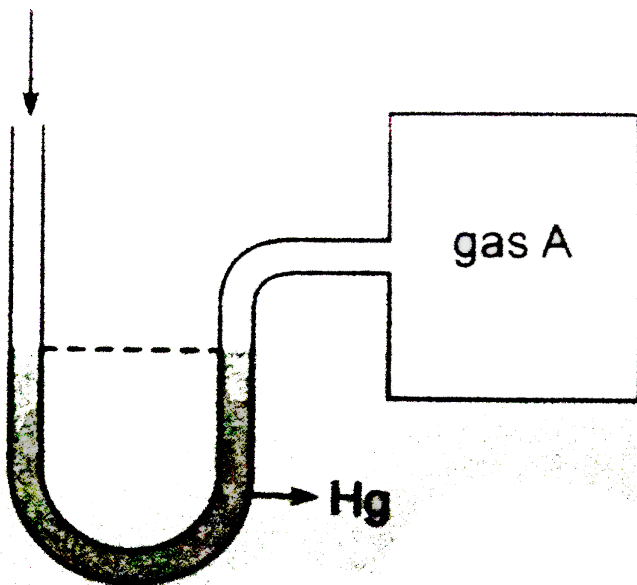
D. AT low pressure, the compressibility factor ' $Z=1+\frac{P \cdot b}{RT}$ ' for a van der Waals' gas.

Answer: a,b,c

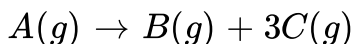
 [Watch Video Solution](#)

15. A open ended mercury manometer is used to measure the pressure exerted by a trapped gas as shown in the figure. Initially manometer shows no difference in mercury level in both columns as shown in diagram.

$$P = 76 \text{ cm}$$



After sparking 'A' dissociates according to following reaction



If pressure of Gas "A" dissociates to 0.9 atm, then (Assume temperature to be constant and is 300 K)

- A. total pressure increases to 1.3 atm
- B. total pressure increases by 0.3 atm
- C. total pressure increases by 22.3 cm of Hg
- D. difference in mercury level is 228 mm.

Answer: a,b,d

 [Watch Video Solution](#)

16. Select incorrect statement for real gases :

- A. In low pressure region repulsive forces dominates
- B. Volume of gas particles is not negligible in low pressure region
- C. Gases behaves as an ideal gas at low pressure and low temperature
- D. In high pressure region attractive forces dominates

Answer: a,b,c,d

 [Watch Video Solution](#)

17. Select correct statements:

- A. A real gas can be liquified at critical temperature
- B. Critical pressure is the maximum pressure at which a substance is present in its liquid state at T_C
- C. Ideal gas can be liquified below T_C
- D. Critical volume is the molar volume of substance in gaseous state at T_C and P_C

Answer: a,d

 [Watch Video Solution](#)

18. Which is/are correct for real gases?

- A. $\lim_{P \rightarrow 0} (PV_m) = \text{constant at constant high temperature}$
- B. $\lim_{V_m \rightarrow 0} (PV_m) = \text{constant at constant low temperature}$
- C. $\lim_{P \rightarrow 0} \left(\frac{PV_m}{RT} \right) = 1 \text{ at high temperature}$

$$D. \lim_{V \rightarrow 0} \left(\frac{PV_m}{RT} \right) = R$$

Answer: a,c



Watch Video Solution

19. Select incorrect statement (s)

- A. At very low pressure real gases show minimum deviation from ideal behaviour.
- B. The compressibility factor for an ideal gas is zero.
- C. At Boyle temperature real gas behave as ideal gas in high pressure region.
- D. Real gas show maximum deviation at high pressure and low temperature.

Answer: b,c



[Watch Video Solution](#)

20. If an ideal gas is heated at constant pressure :

- A. the volume increases
- B. the mass of gas remains same
- C. the kinetic energy of the molecules increases
- D. attraction forces between gas particles increases

Answer: a,b,c



[Watch Video Solution](#)

Match the Column

1. Match the following columns

Column I

- (A) Boyle's temperature
- (B) Inversion temperature
- (C) Critical temperature
- (D) Critical pressure

Column II

- (P) a/Rb
- (Q) $8a/27Rb$
- (R) $2a/Rb$
- (S) $a/27b^2$



Watch Video Solution

2. Match the Column-I to Column-II :

Column I

- (A) Root mean square speed
- (B) Most probable speed
- (C) Average speed
- (D) K.E. of gas mol⁻¹

Column II

- (P) $\frac{3}{2}RT$
- (Q) $\sqrt{\frac{8P}{\pi d}}$
- (R) $\sqrt{\frac{3P}{d}}$
- (S) $\sqrt{\frac{2RT}{M}}$



Watch Video Solution

3. Match the following columns

Column I

- (A) If force of attraction among the gas molecules be negligible
- (B) If the volume of the gas molecules be negligible
- (C) At STP
- (D) At low pressure and at high temperature

Column II

- (P) $\left(P + \frac{a}{V^2}\right)(V - b) = RT$
- (Q) $PV = RT - \frac{a}{V}$
- (R) $PV = RT + Pb$
- (S) $PV = RT$

 Watch Video Solution

4. Match gases under specified condition listed in Column I with their properties/laws in Column II.

Column I

- (A) Hydrogen gas ($P = 200 \text{ atm}, T = 273 \text{ K}$)
- (B) Hydrogen gas ($P \sim 0, T = 273 \text{ K}$)
- (C) CO_2 ($P = 1 \text{ atm}, T = 273 \text{ K}$)
- (D) Real gas with very large molar volume

Column II


- (P) Compressibility factor $\neq 1$
- (Q) Attractive forces are dominant
- (R) $PV = nRT$
- (S) $P(V - nb) = nRT$

 Watch Video Solution

Column I

Column II


(A) $\frac{1}{V}$ vs. P for ideal gas at constant T and n .



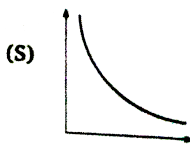
(B) V vs. $\frac{1}{P}$ for ideal gas at constant P and n .



(C) PF vs. T^2 for ideal gas at constant V and n .



(D) V vs. $\frac{1}{p^2}$ for ideal gas at constant T and n .

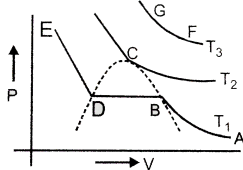


5.



View Text Solution

6. Match the correct column from list-1 to list -2 on the basis of following Andrew's isotherm of real gas.



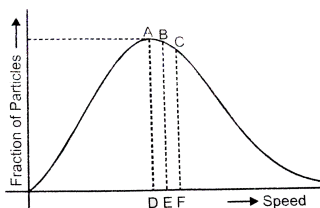
Column-I

- (A) Substance exist in both liquid and gas state
- (B) Only liquid state exist
- (C) Substance exist in gas state only
- (D) Real gas is called super critical fluid

Column-II

- (P) At AB part
- (Q) At BD part
- (R) At DE part
- (S) At point C
- (T) At GF curve

Watch Video Solution



Column-I

- (A) Speed at point 'A' is
- (B) Speed at point 'B' is
- (C) Speed at point 'C' is
- (D) The speed possessed by maximum fraction of the gas particles

Column-II

- (P) $\sqrt{\frac{8RT}{\pi M}}$
- (Q) $\sqrt{\frac{3RT}{M}}$
- (R) U_{rms}
- (S) $\sqrt{\frac{2RT}{M}}$

7.

Watch Video Solution

1. STATEMENT-1 : The Heat absorbed during the isothermal expansion of an ideal gas against vacuum is zero.

STATEMENT-2 : The volume occupied by the molecules of an ideal gas is zero.

- A. If both the statement are TRUE and STATEMENT-2 is the correct explanation of STATEMENT-1
- B. If both the statement are TRUE but STATEMENT-2 is NOT the correct explanation of STATEMENT-1
- C. If STATEMENT-1 is TRUE and STATEMENT-2 is FALSE
- D. If STATEMENT-1 is FALSE and STATEMENT-2 is TRUE

Answer: B



[Watch Video Solution](#)

2. STATEMENT-1 : A lighter gas diffuses mor rapidly than a heavier gas.

STATEMENT-2 : At a given temperature, the rate of diffusion of a gas is inversely proportional to density.

A. If both the statement are TRUE and STATEMENT-2 is the correct explanation of STATEMENT-1

B. If both the statement are TRUE but STATEMENT-2 is NOT the correct explanation of STATEMENT-1

C. If STATEMENT-1 is TRUE and STATEMENT-2 is FALSE

D. If STATEMENT-1 is FALSE and STATEMENT-2 is TRUE

Answer: C

 [Watch Video Solution](#)

3. Assertion: The value of van der Waals constant a is larger for ammonia than for nitrogen.

Reason: Hydrogen bonding is present in ammonia.

A. If both the statement are TRUE and STATEMENT-2 is the correct explanation of STATEMENT-1

B. If both the statement are TRUE but STATEMENT-2 is NOT the correct explanation of STATEMENT-1

C. If STATEMENT-1 is TRUE and STATEMENT-2 is FALSE

D. If STATEMENT-1 is FALSE and STATEMENT-2 is TRUE

Answer: A



Watch Video Solution

4. Assertion: Helium shows only positive deviations from ideal behaviour.

Reason: Helium is an inert gas.

A. If both the statement are TRUE and STATEMENT-2 is the correct explanation of STATEMENT-1

B. If both the statement are TRUE but STATEMENT-2 is NOT the correct explanation of STATEMENT-1

C. If STATEMENT-1 is TRUE and STATEMENT-2 is FALSE

D. If STATEMENT-1 is FALSE and STATEMENT-2 is TRUE

Answer: B



[Watch Video Solution](#)

5. Statement-1: CH_4 , CO_2 has value of Z (compressibility factor) less than one, generally. Statement-2: $Z < 1$ is due to repulsive forces among the molecules.

- A. If both the statement are TRUE and STATEMENT-2 is the correct explanation of STATEMENT-1
- B. If both the statement are TRUE but STATEMENT-2 is NOT the correct explanation of STATEMENT-1
- C. If STATEMENT-1 is TRUE and STATEMENT-2 is FALSE
- D. If STATEMENT-1 is FALSE and STATEMENT-2 is TRUE

Answer: A



Watch Video Solution

6. Assertion (A): The Joules -Thomson coefficient for an ideal gas is zero.

Reason (R) : There are no intermolecular attractive forces in an ideal gas.

A. If both the statement are TRUE and STATEMENT-2 is the correct explanation of STATEMENT-1

B. If both the statement are TRUE but STATEMENT-2 is NOT the correct explanation of STATEMENT-1

C. If STATEMENT-1 is TRUE and STATEMENT-2 is FALSE

D. If STATEMENT-1 is FALSE and STATEMENT-2 is TRUE

Answer: A



Watch Video Solution

7. STATEMENT-1 : The average translational kinetic energy per molecule of the gas per degree of freedom is $\frac{1}{2} kT$.

STATEMENT-2 : For every molecule there are three rotational degree of freedom.

A. If both the statement are TRUE and STATEMENT-2 is the correct explanation of STATEMENT-1

B. If both the statement are TRUE but STATEMENT-2 is NOT the correct explanation of STATEMENT-1

C. If STATEMENT-1 is TRUE and STATEMENT-2 is FALSE

D. If STATEMENT-1 is FALSE and STATEMENT-2 is TRUE

Answer: C

 [Watch Video Solution](#)

8. STATEMENT-1 : On increasing the temperature, the height of the peak of the Maxwell distribution curve decreases.

STATEMENT-2 : The fraction of molecules is very less at the higher speeds.

A. If both the statement are TRUE and STATEMENT-2 is the correct explanation of STATEMENT-1

B. If both the statement are TRUE but STATEMENT-2 is NOT the correct explanation of STATEMENT-1

C. If STATEMENT-1 is TRUE and STATEMENT-2 is FALSE

D. If STATEMENT-1 is FALSE and STATEMENT-2 is TRUE

Answer: B

 [Watch Video Solution](#)

9. STATEMENT-1 : The gases He and H_2 are very different in their behaviour at any temperature and pressure but their compressibility factors are nearly the same at the critical point.

STATEMENT-2 : They have nearly the same critical constant.

A. If both the statement are TRUE and STATEMENT-2 is the correct explanation of STATEMENT-1

B. If both the statement are TRUE but STATEMENT-2 is NOT the correct explanation of STATEMENT-1

C. If STATEMENT-1 is TRUE and STATEMENT-2 is FALSE

D. If STATEMENT-1 is FALSE and STATEMENT-2 is TRUE

Answer: C

 [Watch Video Solution](#)

10. Assertion: Most probable velocity is the velocity possessed by maximum fraction of molecules at the same temperature.

Reason: On collision, more and more molecules acquire higher speed at the same temperature.

A. If both the statement are TRUE and STATEMENT-2 is the correct explanation of STATEMENT-1

B. If both the statement are TRUE but STATEMENT-2 is NOT the correct explanation of STATEMENT-1

C. If STATEMENT-1 is TRUE and STATEMENT-2 is FALSE

D. If STATEMENT-1 is FALSE and STATEMENT-2 is TRUE

Answer: C

 [Watch Video Solution](#)

11. STATEMENT-1 : Plot of P vs $1/V$ (volume) is a straight line for an ideal gas.

STATEMENT-2 : Pressure is directly proportional to volume for an ideal gas.

A. If both the statement are TRUE and STATEMENT-2 is the correct explanation of STATEMENT-1

B. If both the statement are TRUE but STATEMENT-2 is NOT the correct explanation of STATEMENT-1

C. If STATEMENT-1 is TRUE and STATEMENT-2 is FALSE

D. If STATEMENT-1 is FALSE and STATEMENT-2 is TRUE

Answer: C

 [Watch Video Solution](#)

12. STATEMENT-1 : 1 mol of H_2 and O_2 each occupy 22.7 L of volume at $0^\circ C$ and 1 bar pressure, considering ideal behaviour.

STATEMENT-2 : Molar volume for all ideal gases at the same temperature and pressure are equal.

- A. If both the statement are TRUE and STATEMENT-2 is the correct explanation of STATEMENT-1
- B. If both the statement are TRUE but STATEMENT-2 is NOT the correct explanation of STATEMENT-1
- C. If STATEMENT-1 is TRUE and STATEMENT-2 is FALSE
- D. If STATEMENT-1 is FALSE and STATEMENT-2 is TRUE

Answer: A

 [Watch Video Solution](#)

13. STATEMENT-1 : Reacting gases react to form a new gas having pressure equal to the sum of their partial pressure.

STATEMENT-2 : Pressure exerted by a mixture of non-reacting gases present in a container is equal to the sum of their partial pressures.

A. If both the statement are TRUE and STATEMENT-2 is the correct explanation of STATEMENT-1

B. If both the statement are TRUE but STATEMENT-2 is NOT the correct explanation of STATEMENT-1

C. If STATEMENT-1 is TRUE and STATEMENT-2 is FALSE

D. If STATEMENT-1 is FALSE and STATEMENT-2 is TRUE

Answer: D



Watch Video Solution

14. STATEMENT-1 : $1/4^{th}$ of the initial mole of the air is expelled, if air present in an open vessel is heated from $27^{\circ}C$ to $127^{\circ}C$.

STATEMENT-2 : Rate of diffusion of a gas is inversely proportional to the square root of its molecular mass.

A. If both the statement are TRUE and STATEMENT-2 is the correct explanation of STATEMENT-1

B. If both the statement are TRUE but STATEMENT-2 is NOT the correct explanation of STATEMENT-1

C. If STATEMENT-1 is TRUE and STATEMENT-2 is FALSE

D. If STATEMENT-1 is FALSE and STATEMENT-2 is TRUE

Answer: B

 [Watch Video Solution](#)

15. STATEMENT-1 : Compressibility factor for hydrogen varies with pressure with positive slope at all pressures at $0^{\circ} C$.

STATEMENT-2 : Even at low pressures, repulsive forces dominate in hydrogen gas at $0^{\circ} C$.

A. If both the statement are TRUE and STATEMENT-2 is the correct explanation of STATEMENT-1

B. If both the statement are TRUE but STATEMENT-2 is NOT the correct explanation of STATEMENT-1

C. If STATEMENT-1 is TRUE and STATEMENT-2 is FALSE

D. If STATEMENT-1 is FALSE and STATEMENT-2 is TRUE

Answer: A

 [Watch Video Solution](#)

16. STATEMENT-1 : Wet air is heavier than dry air.

STATEMENT-2 : The density of dry air is less than the density of water at 1 atm and 273K.

- A. If both the statement are TRUE and STATEMENT-2 is the correct explanation of STATEMENT-1
- B. If both the statement are TRUE but STATEMENT-2 is NOT the correct explanation of STATEMENT-1
- C. If STATEMENT-1 is TRUE and STATEMENT-2 is FALSE
- D. If STATEMENT-1 is FALSE and STATEMENT-2 is TRUE

Answer: D



Watch Video Solution

Subjective problems

1. A bubble of gas released at the bottom of a lake increases to four times its original volume when it reaches the surface. Assuming that atmospheric pressure is equivalent to the pressure exerted by a column of water 10 m high, what is the depth of the lake?

 [Watch Video Solution](#)

2. A gaseous mixture containing equal mole of H_2 , O_2 and He is subjected to series of effusion steps. The composition (by moles) of effused mixture after 4 effusion steps is $x : 1 : y$ respectively. Then find the value of $\left(\frac{x}{y}\right)$.

 [Watch Video Solution](#)

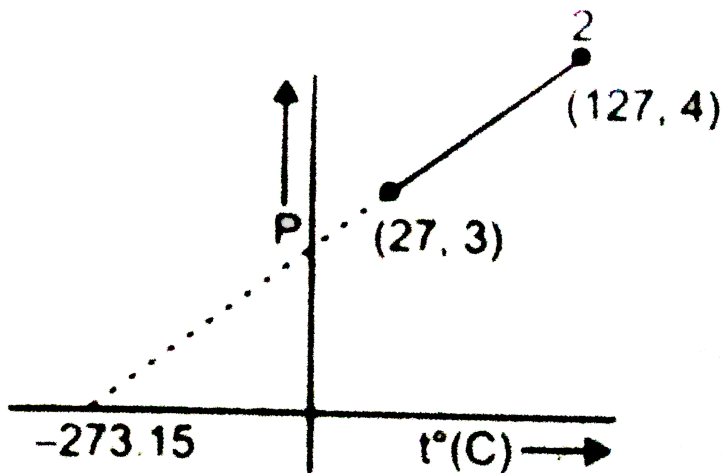
3. One mole of a gas changed from its initial state (15L, 2 atm) to final state (4L, 10 atm) reversibly. If this change can be represented by a

straight line in P - V curve maximum temperature (approximate), the gas attained is $x \times 10^2 K$. Then find the value of x.

[▶ Watch Video Solution](#)

4. Two moles of an ideal gas undergoes the following process. Given

that $\left(\frac{\partial P}{\partial T}\right)_V$ is $x \times 10^{+y}$, then calculate the value of (x + Y)



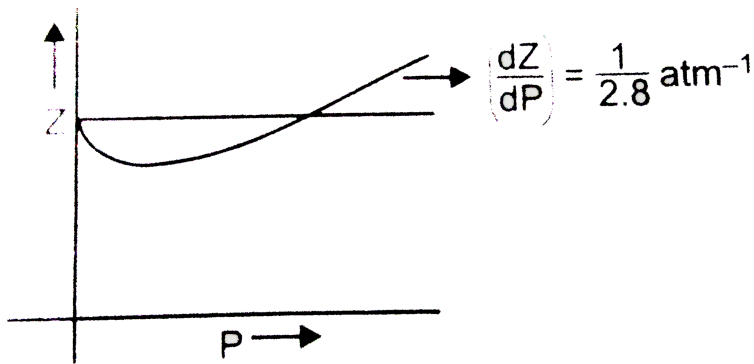
[▶ Watch Video Solution](#)

5. 1 mole of a diatomic gas present in 10 L vessel at certain temperature exert a pressure of 0.96 atm. Under similar conditions an ideal gas exerted 1.0 atm pressure. If volume of gas molecule is negligible, then find the value of van der Waals' constant "a" (in $\text{atm L}^2 / \text{mol}^2$).

 [Watch Video Solution](#)

6. The graph of compressibility factor (Z) vs. P for one mole of a real gas is shown in following diagram. The graph is plotted at constant temperature 273K. If the slope of graph at very high pressure $\left(\frac{dZ}{dP}\right)$ is $\left(\frac{1}{2.8}\right) \text{atm}^{-1}$, then calculate volume of one mole of real gas molecules (in L/mol)

Given : $N_A = 6 \times 10^{23}$ and $R = \frac{22.4}{273} \text{ LatmK}^{-1} \text{ mol}^{-1}$



[▶ Watch Video Solution](#)

7. Under the identical conditions of temperature, the density of a gas X is two times to that of gas Y while molecular mass of gas Y is three times that of X. Calculate the ratio of pressure of X and Y.

[▶ Watch Video Solution](#)

8. The time for a certain volume of a gas A to diffuse through a small hole is 2 minute If takes 5.65 minute for oxygen to diffuse

under similar conditions Find the molecular weight of A .

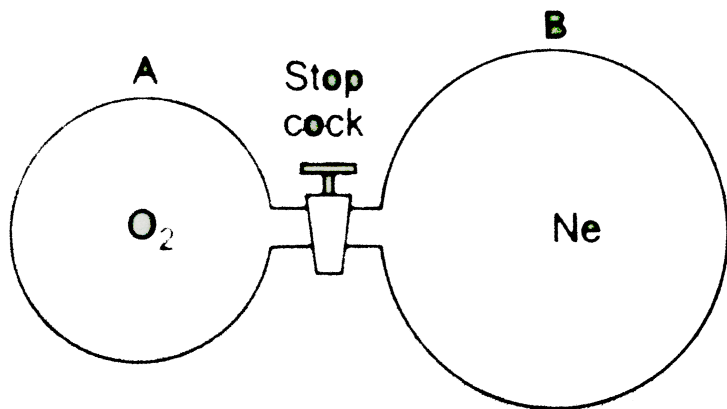
 [Watch Video Solution](#)

9. Excess $F_2(g)$ reacts at $150^\circ C$ and 1.0 atm pressure with $Br_2(g)$ to give a compound BrF_n . If 423 mL of $Br_2(g)$ at the same temperature and pressure produced 4.2 g of BrF_n , what is n ?

[Atomic mass Br =80, F =19]

 [Watch Video Solution](#)

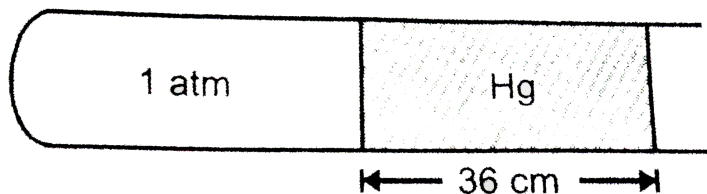
10. Initially bulb "a" contained oxygen gas at $27^\circ C$ and 950 mm of Hg and bulb "B" contained neon gas at $27^\circ C$ and 900 mm of Hg. These bulbs are connected by a narrow tube of negligible volume equipped with a stopcock and gases were allowed to mix-up freely. The pressure obtained in the combined system was found to be 910 mm of Hg.



If volume of bulb B was measured to be 10 L, then find the volume of oxygen gas present initially in bulb "A" .

[Watch Video Solution](#)

11. Air is trapped in a horizontal glass tube by 36 cm mercury column as shown below :



If the tube is held vertical keeping the open end up, length of air column shrink to

19 cm. What is the length (in cm) by which the mercury column shifts down?

 [Watch Video Solution](#)

12. A flask containing air at $107^{\circ}C$ and 722 mm of Hg is cooled to 100 K and 760 mm of Hg. If density in the initial condition $1g/cm^3$, then what is the final density (g/cm^3)?

 [Watch Video Solution](#)

13. If an ideal gas at 100 K is heated to 109 K in a rigid container, the pressure increases by X%. What is the value of X?

 [Watch Video Solution](#)

14. The van der Waals' constants for a gas are $a = 3.6 \text{ atm L}^2 \text{ mol}^{-2}$, $b = 0.6 \text{ L mol}^{-1}$.If

$R = 0.08 \text{ Latm K}^{-1} \text{ mol}^{-1}$ and the Boyle's temperature (K) is T_B of this gas, then what is the value of $\frac{T_B}{15}$?

 [Watch Video Solution](#)

15. A flask has 10 molecules out of which four molecules are moving at 7 m s^{-1} and the remaining ones are moving at same speed of $X \text{ m s}^{-1}$. If rms of the gas is 5 m s^{-1} , what is X ?

 [Watch Video Solution](#)