

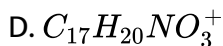
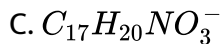
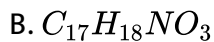
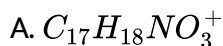
CHEMISTRY

BOOKS - NARENDER AVASTHI CHEMISTRY (ENGLISH)

IONIC EQUILIBRIUM

Level 1

1. Morphine ($C_{17}H_{19}NO_3$), which is used medically to relieve pain is a base. What is its conjugate acid?

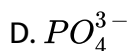
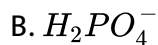
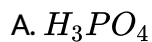


Answer: D



Watch Video Solution

2. The conjugate base of $H_2PO_4^-$ is :



Answer: C



Watch Video Solution

3. The strongest Bronsted base in the following anion is:



D. Br^-

Answer: A

 [Watch Video Solution](#)

4. What salt can furnish H^+ in its aqueous solution?

A. NaH_2PO_2

B. Na_2HPO_3

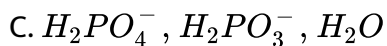
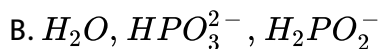
C. Na_2HPO_4

D. All of these

Answer: C

 [Watch Video Solution](#)

5. Which is the set of amphiprotic species?



D. All of these

Answer: C

 [Watch Video Solution](#)

6. The K_a values for HPO_4^{2-} and HSO_3^- are 4.8×10^{-13} and 6.3×10^{-8} respectively. Therefore, it follows the HPO_4^{2-} is ... acid than HSO_3^- and PO_4^{3-} is a base than SO_3^{2-}

A. weaker, stronger

B. stronger, weaker

C. weaker, weaker

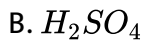
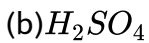
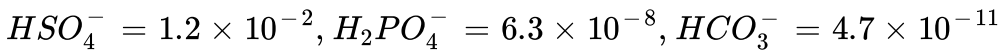
D. stronger, stronger

Answer: A



Watch Video Solution

7. Given the following K_a values, determine which species is the strongest base ?



Answer: A





Watch Video Solution

8. Given that K_w for water is $10^{-13} M^2$ at $62^\circ C$, compute the sum of pOH and pH for a neutral aqueous solution at $62^\circ C$:

(a) 7.0

(b) 13.30

(c) 14.0

(d) 13.0

A. 7.0

B. 13.30

C. 14.0

D. 13.0

Answer: D



Watch Video Solution

9. The value of the ion product constant for water, (K_w) at 60°C is $9.6 \times 10^{-14} \text{ M}^2$ what is the $[\text{H}_3\text{O}^+]$ of a neutral aqueous solution at 60°C and an aqueous solution with a $\text{pH}=7.0$ at 60°C are respectively?

- A. 3.1×10^{-8} acidic
- B. 3.1×10^{-7} , neutral
- C. 3.1×10^{-8} , basic
- D. 3.1×10^{-7} , basic

Answer: D



[Watch Video Solution](#)

10. For pure water:

- A. pH increases while pOH decreases with rise in temperature
- B. pH decreases while pOH increases with rise in temperature
- C. both pH and pOH decreases with rise in temperature

D. both pH and pOH increases with rise in temperature

Answer: C

 [Watch Video Solution](#)

11. A beer has a pH of 4.30. What is the $[H_3O^+]$?

(a) 3.0×10^{-4}

(b) 2.0×10^{-4}

(c) 2.0×10^5

(d) 5.0×10^{-5}

A. 3.0×10^{-4}

B. 2.0×10^{-4}

C. 2.0×10^5

D. 5.0×10^{-5}

Answer: D

 [Watch Video Solution](#)

12. The hydrogen ion concentration of the oceans is about 2×10^{-9} M.

What is the pH?

A. 8.85

B. 9.3

C. 7.85

D. 8.7

Answer: D



[Watch Video Solution](#)

13. The hydroxide ion concentration of a wine is 8×10^{-11} M. What is the pH of the wine?

A. 2.10

B. 2.9

C. 3.9

D. 4.9

Answer: C

 [Watch Video Solution](#)

14. The pH of a solution is 5. to this solution acid was added so that its pH value becomes 2.0. The increase in H^+ concentration is :

A. 100 times

B. 5 times

C. 2.5 times

D. 1000 times

Answer: D

 [Watch Video Solution](#)

15. A solution has a $pH=9$. It is 1000 times more basic than the original solution. What was the pH of the original solution?

A. 12

B. 6

C. 9

D. 10

Answer: B



[Watch Video Solution](#)

16. Equal volumes of two HCl solutions of $pH = 3$ and $pH = 5$ were mixed. What is the pH of the resulting solution ?

A. 3.5

B. 4.0

C. 4.5

D. 3.3

Answer: D



[Watch Video Solution](#)

17. pOH of $0.002M HNO_3$ is :

A. $11 + \log 2$

B. $11 - \log 2$

C. $-3 + \log 2$

D. None of these

Answer: A



[Watch Video Solution](#)

18. Number of equivalents of HCl present in 100 mL of its solution whose pH is 4:

A. 10^{-4}

B. 10^{-3}

C. 10^{-2}

D. 10^{-5}

Answer: D



[Watch Video Solution](#)

19. To a 10 mL of $10^{-3}\text{ NH}_2\text{SO}_4$ solution water has been to make the total volume of one litre. Its pOH would be :

A. 3

B. 12

C. 9

D. 5

Answer: C



Watch Video Solution

20. The pH of a solution of H_2SO_4 is 1. Assuming complete ionisation, find the molarity of H_2SO_4 solution :

A. 0.1

B. 0.2

C. 0.05

D. 2.0

Answer: C



Watch Video Solution

21. pH of a strong diprotic acid (H_2A) at concentrations:

(i) 10^{-4} M, (ii) 10^{-4} N

are respectively:

A. 3.7 and 4.0

B. 4 and 3.7

C. 4 and 4

D. 3.7 and 3.7

Answer: A



[Watch Video Solution](#)

22. Calcium hydroxide is a strong base. Compute $[Ca^{2+}]$ and $[OH^-]$

"for" a solution that is prepared by dissolving 0.60g of $Ca(OH)_2$ in enough water to make a 1500 mL of solution.

[Atomic mass : $Ca = 40$, $O = 16$, $H = 1$]

A. 5.4×10^{-3} , 9.1×10^{-13}

B. 5.4×10^{-3} , 1.08×10^{-2}

C. 5.4×10^{-3} , 5.4×10^{-3}

D. 8.1×10^{-3} , 8.1×10^{-3}

Answer: B



[Watch Video Solution](#)

23. pH of 10^{-6} M HCl (aq.) is :

A. just less than 6

B. exactly equal to 6

C. just greater than 6

D. just less than 7

Answer: B



[Watch Video Solution](#)

24. $10^{-5} M HCl$ solution at $25^{\circ} C$ is diluted 1000 times. The pH of the diluted solution will

- A. be equal to 8
- B. lie between 7 and 8
- C. lie between 6 and 7
- D. remain unchanged

Answer: C



[Watch Video Solution](#)

25. 4.0 g of NaOH and 4.9 g of H_2SO_4 are dissolved in water and volume is made upto 250 mL.

The pH of this solution is:

- A. 7.0

B. 1.0

C. 2.0

D. 12.0

Answer: A



Watch Video Solution

26. A 25.0 mL sample of 0.10 M HCl is titrated with 0.10 M NaOH. What is the pH of the solution at the points where 24.9 and 25.1 mL of NaOH have been added?

A. 3.70, 10.70

B. 3.30, 10.30

C. 3.70, 10.30

D. 3.0, 11.0

Answer: C



Watch Video Solution

27. What is the pH of solution in which 25.0 mL of 0.1 M NaOH is added to 25 mL of 0.08M HCl and final solution is diluted to 500 mL?

A. 3

B. 11

C. 12

D. 13

Answer: B



Watch Video Solution

28. What is the pH of a solution in which 10.0 mL of 0.010 M $Sr(OH)_2$ is added to 10.0 mL of 0.010 M HCl ?

A. 2.30

B. 1.50

C. 11.70

D. 7.00

Answer: C



Watch Video Solution

29. At 90°C , pure water has $[H^+] = 10^{-6}$ M. If 100 mL of 0.2 M HCl is added to 200 mL of 0.1 M KOH at 90°C then pH of the resulting solution will be :

A. 5

B. 6

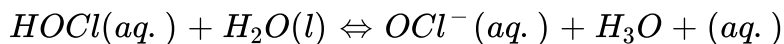
C. 7

D. None of these

Answer: B

 Watch Video Solution

30. What change will occur for the following reaction if the hypochlorous acid solution is diluted from 0.1 to 0.01 M?

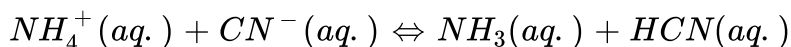


- A. a decrease in the fraction of acid ionized
- B. an increase in the fraction of acid ionized
- C. no change in the fraction of acid ionized
- D. we can not predict

Answer: B

 Watch Video Solution

31. Given K_a values of 5.76×10^{-10} and 4.8×10^{-10} for NH_4^+ and HCN respectively. What is the equilibrium constant for the following reaction?



A. 0.83

B. 1.2

C. 8.0×10^{-11}

D. 27.6×10^{-10}

Answer: B

 [Watch Video Solution](#)

32. Which is the strongest acid (pK_a value is given)?

A. $HCOOH$ [3.77]

B. C_6H_5COOH [4.22]

C. CH_3COOH [4.7]

D. CH_3CH_2COOH [4.88]

Answer: A

 [Watch Video Solution](#)

33. Given : Enthalpy of ionization of two acids :

$$\Delta H^\circ(\text{HCN}) = 45.2 \text{ KJmol}^{-1}$$

$$\Delta H^\circ(\text{CH}_3\text{COOH}) = 2.1 \text{ KJmol}^{-1}$$

which relationship for the two acids is true ?

A. $pK_a(\text{HCN}) = pK_a(\text{CH}_3\text{COOH})$

B. $pK_a(\text{HCN}) > pK_a(\text{CH}_3\text{COOH})$

C. $pK_a(\text{HCN}) < pK_a(\text{CH}_3\text{COOH})$

D. $pK_a(\text{HCN}) = \frac{45.2}{2.1} pK_a(\text{CH}_3\text{COOH})$

Answer: B



Watch Video Solution

34. What is the hydronium ion concentration of a 0.25 M HA solution?

$$(K_a = 4 \times 10^{-8})$$

A. 10^{-4}

B. 10^{-5}

C. 10^{-7}

D. 10^{-10}

Answer: A



Watch Video Solution

35. What is the percent dissociation (α) of a 0.01 M HA solution?

($K_a = 10^{-4}$)

A. 9.5 %

B. 1 %

C. 10.5 %

D. 17 %

Answer: A

 [Watch Video Solution](#)

36. Given the two concentration of HCN ($K_a = 10^{-9}$) are 0.1 M and 0.001 M respectively. What will be the ratio of degree of dissociation?

- A. 1
- B. 0.1
- C. 0.003
- D. 0.01

Answer: B

 [Watch Video Solution](#)

37. A 0.10 M solution of HF is 8.0 % dissociated. What is the K_a ?

- A. 6.4×10^{-10}
- B. 8.8×10^{-4}

C. 6.95×10^{-4}

D. 7.6×10^{-4}

Answer: C

 [Watch Video Solution](#)

38. A weak base *MOH* of $0.1N$ concentration shows a *pH* value of 9 .

What is the percentage degree of ionization of the base ?

A. 0.01 %

B. 0.001 %

C. 0.1 %

D. 0.02 %

Answer: A

 [Watch Video Solution](#)

39. 0.01 M HA (aq.) is 2 % dissociated, $[OH^-]$ of solution is :

A. 2×10^{-4}

B. 10^{-8}

C. 5×10^{-11}

D. 5×10^{-12}

Answer: C



Watch Video Solution

40. If degree of dissociation is 0.01 of decimolar solution of weak acid HA then pK_a of acid is :

A. 2

B. 3

C. 5

D. 7

Answer: C

 [Watch Video Solution](#)

41. What concentration of $HCOO^-$ is present in a solution of weak of 0.01 M $HCOOH$ ($K_a = 1.8 \times 10^{-4}$ and 0.01 M HCl)?

A. 1.8×10^{-3}

B. 10^{-2}

C. 1.8×10^{-4}

D. 10^{-4}

Answer: C

 [Watch Video Solution](#)

42. Choose the correct code

Column – I

(P) pK_b of X^- (K_a of $HX = 10^{-6}$)

(Q) pH of $10^{-8} M HCl$

(R) pH of $10^{-2} M$ acetic acid solution (Take K_a of acetic acid = 1.6×10^{-5})

(S) pOH of a solution obtained by mixing equal volumes of solution with

- A.

<i>P</i>	<i>Q</i>	<i>R</i>	<i>S</i>
1	2	4	3
- B.

<i>P</i>	<i>Q</i>	<i>R</i>	<i>S</i>
4	3	2	1
- C.

<i>P</i>	<i>Q</i>	<i>R</i>	<i>S</i>
2	1	4	3
- D.

<i>P</i>	<i>Q</i>	<i>R</i>	<i>S</i>
1	2	3	4

Answer: C



Watch Video Solution

43. How much water must be added to $300 mL$ of a $0.2 M$ solution of CH_3COOH for the degree of dissociation of the acid to double? (Assume K_a of acetic is of order of $10^{-5} M$)

- A. 600 mL
- B. 900 mL
- C. 1200 mL
- D. 1500 mL

Answer: B

 [Watch Video Solution](#)

44. What is $[NH_4^+]$ in a solution that contain 0.02 M NH_3 ($K_b = 1.8 \times 10^{-5}$) and 0.01 M KOH?

- A. 9×10^{-6}
- B. 1.8×10^{-5}
- C. 3.6×10^{-5}
- D. None of these

Answer: C

 [Watch Video Solution](#)

45. A hand book states that the solubility of RNH_2 (g) in water at 1 atm and 0°C is 22.41 litres volumes of RNH_2 (g) per volume of water. (pK_b of $RNH_2 = 4$) Find the max. pOH that can be attained by dissolving RNH_2 in water:

A. 1

B. 2

C. 4

D. 6

Answer: B

 [Watch Video Solution](#)

46. The $[H^+]$ of a resulting solution that is 0.01 M acetic acid ($K_a = 1.8 \times 10^{-5}$) and 0.01 M in benzoic acid ($K_a = 6.3 \times 10^{-5}$):

A. 9×10^{-4}

B. 81×10^{-4}

C. 9×10^{-5}

D. 2.8×10^{-3}

Answer: A

 [Watch Video Solution](#)

47. 6.0 g weak acid HA (mol.mass=60 g/mol.) is dissolved in water and formed 10 m^3 solution. If $K_a(HA) = 10^{-9}$, then pOH of solution is :

[Given: $\log 4=0.6$]

A. 7

B. greater than 6.7 and less than 7.0

C. greater than 7.0 and less than 7.3

D. greater than 7.3

Answer: A



Watch Video Solution

48. Carbonic acid (H_2CO_3), a diprotic acid has $K_{a1} = 4.0 \times 10^{-7}$ and $K_{a2} = 7.0 \times 10^{-11}$. What is the $[HCO_3^-]$ of a 0.025 M solution of carbonic acid?

A. 7.8×10^{-3}

B. 6.6×10^{-4}

C. 10^{-10}

D. 1.0×10^{-4}

Answer: D



Watch Video Solution

49. Carbonic acid (H_2CO_3), a diprotic acid has $K_{a1} = 4.0 \times 10^{-7}$ and $K_{a2} = 7.0 \times 10^{-11}$. What is the $[CO_3^{2-}]$ of a 0.025 M solution of carbonic acid?

A. 5.5×10^{-9}

B. 5.5×10^{-8}

C. 7.0×10^{-9}

D. 7.0×10^{-11}

Answer: D



Watch Video Solution

50. Selenious acid (H_2SeO_3), a diprotic acid has $K_{a1} = 3.0 \times 10^{-3}$ and $K_{a2} = 5.0 \times 10^{-8}$. What is the $[OH^-]$ of a 0.30 M solution of selenious acid?

A. 2.85×10^{-3}

B. 5.0×10^{-6}

C. 3.5×10^{-12}

D. 3.5×10^{-13}

Answer: D

 [Watch Video Solution](#)

51. Which of the hydrated species may exist?

I : $H_5O_2^+$, II : H_3O^+ , III : $H_3O_2^-$, IV : $H_7O_3^+$

A. II only

B. I and II

C. I, II and IV

D. I, II, III and IV

Answer: D

 [Watch Video Solution](#)

52. Consider the following salts. Which one(s) when dissolved in water will produce an acidic solution?

1. NH_4Cl , 2. $KHSO_4$, 3. $NaCN$, 4. KNO_3

A. 2 and 3

B. 1 and 2

C. only 3

D. 2 and 4

Answer: B



Watch Video Solution

53. Consider the following salts. Which one(s) when dissolved in water will produce a basic solution?

1. $RbClO_4$, 2. $NaNO_2$, 3. NH_4Cl , 4. $NaCl$

A. 1 and 3

B. only 3

C. 1 and 2

D. 3 and 4

Answer: B



Watch Video Solution

54. At 25°C dissociation constants of acid HA and base BOH in aqueous solution are same. The pH of 0.01 M solution of HA is 5. The pOH of 10^{-4} M solution of BOH at the same temperature is :

A. 3.5

B. 4

C. 6

D. None of these

Answer: C

 [Watch Video Solution](#)

55. Which of the following solutions has the highest pH?

A. $0.2M HClO_4$

B. $0.20M CH_3COOH$

C. $0.020M HCl$

D. $0.2M NaCl$

Answer: D

 [Watch Video Solution](#)

56. pH of solutions of four sodium salts NaW, NaX, NaY and NaZ were found to be 7.0, 9.0, 10.0 and 11.0 respectively. If each solution has concentration 0.1 M, the weakest acid is :

A. HW

B. HX

C. HY

D. HZ

Answer: D



Watch Video Solution

57. The pH values 0.1 M solution of HCOONa (I), HCOOH (II), CH_3COONH_4 (III), NaOH (IV) HCl (V), will be in the order :

A. $IV > III > I > II > V$

B. $IV > I > III > II > V$

C. $II > III > I > IV > V$

D. $V > II > III > I > IV$

Answer: B

 [Watch Video Solution](#)

58. pH of an aqueous NaCl solution at 50°C should be :

- A. 7
- B. > 7
- C. < 7
- D. 0

Answer: C

 [Watch Video Solution](#)

59. Upon hydrolysis of sodium carbonate, the reaction takes place between:

- A. Na^+ and water
- B. Na^+ and OH^-

C. CO_3^{2-} and water

D. CO_3^{2-} and H^+

Answer: C

 [Watch Video Solution](#)

60. The solution of blue vitrol in water is acidic because:

A. $CuSO_4$ reacts with water

B. Cu^{2+} reacts with water

C. SO_4^{2-} reacts with water

D. $CuSO_4$ receives OH^- ions from water

Answer: B

 [Watch Video Solution](#)

61. 1 mL of 0.1 N HCl is added to 999 mL solution of NaCl. The pH of the resulting solution will be :

- A. 7
- B. 4
- C. 2
- D. 1

Answer: B



[Watch Video Solution](#)

62. If a salt of strong acid and weak base hydrolyses appreciably ($\alpha = 0.1$), which of the following formula is to be used to calculate degree of hydrolysis 'alpha'?

- A. $\alpha = \frac{\sqrt{K_w}}{K_a \cdot a}$
- B. $\alpha = \frac{\sqrt{K_w}}{K_b \cdot a}$

$$C. \alpha = \frac{\sqrt{K_w}}{K_a \cdot K_b}$$

D. None of these

Answer: b

 [Watch Video Solution](#)

63. The correct formula to calculate the hydroxyl ion concentration of an aqueous solution of NH_4NO_3 is:

A. $\sqrt{\frac{C \times K_w}{K_b}}$

B. $\sqrt{\frac{K_w \times K_b}{C}}$

C. $\sqrt{\frac{C \times K_w}{K_a}}$

D. $\sqrt{\frac{K_a \times K_w}{C}}$

Answer: B

 [Watch Video Solution](#)

64. $[H^+] = \sqrt{\frac{K_w K_a}{C}}$ is suitable for

A. $NaCl, NH_4Cl$

B. $CH_3COONa, NaCN$

C. $CH_3COONa, (NH_4)_2SO_4$

D. $CH_3COONH_4, (NH_4)_2CO_3$

Answer: b

 [Watch Video Solution](#)

65. What is the hydrolysis constant of the OCl^- ion? The ionization constant of $HOCl$ is 3.0×10^{-8} .

A. 3.33×10^{-8}

B. 3.33×10^{-7}

C. 3.0×10^{-7}

D. 3.33×10^{-6}

Answer: B

 [Watch Video Solution](#)

66. What is the pH of a 0.10 M $C_6H_5O^-$ solution? The K_a of C_6H_5OH is

$$1.0 \times 10^{-10}$$

A. 10.51

B. 11.04

C. 11.50

D. 12

Answer: C

 [Watch Video Solution](#)

67. Calculate the $[OH^-]$ in 0.01M aqueous solution of $NaOCN$ (K_b for $OCN^- = 10^{-10}$):

(a) 10^{-6} M

(b) 10^{-7} M

(c) 10^{-8} M

(d) None of these

A. 10^{-6} M

B. 10^{-7} M

C. 10^{-8} M

D. None of these

Answer: A



[Watch Video Solution](#)

68. What is the ionization constant of an acid if the hydronium ion concentration of a 0.40 M solution is 1.40×10^{-4} M?

(a) 1.96×10^{-8}

(b) 1.22×10^{-9}

(c) 4.90×10^{-8}

(d) 1.40×10^{-6}

A. 1.96×10^{-8}

B. 1.22×10^{-9}

C. 4.90×10^{-8}

D. 1.40×10^{-6}

Answer: C



Watch Video Solution

69. The degree of hydrolysis of 0.1 M RNH_3Cl solution is 1.0%. If the concentration of RNH_3Cl is made 0.4 M, what is the new degree of hydrolysis (in percentage)?

A. 0.01

B. 0.001

C. 0.2

D. 0.5

Answer: D



Watch Video Solution

70. % hydrolysis of 0.1M CH_3COONH_4 , when

$K_a(CH_3COOH) = K_b(NH_4OH) = 1.8 \times 10^{-5}$ is:

(a) 0.55

(b) 7.63

(c) 0.55×10^{-2}

(d) 7.63×10^{-3}

A. 0.55

B. 7.63

C. 0.55×10^{-2}

D. 7.63×10^{-3}

Answer: A



[Watch Video Solution](#)

71. The enthalpy of neutralisation of four acids HA,HB,HC and HD with NaOH are -13,-12,-11,-10 Kcal//mol. Which salt has maximum degree of hydrolysis?

A. 1 M NaA

B. 1 M NaB

C. 1 M NaC

D. 1 M NaD

Answer: D



[Watch Video Solution](#)

72. Calculate $[H^+]$ at equivalent point between titration of 0.1 M, 25 mL of weak acid HA ($K_{a(HA)} = 10^{-5}$ with 0.05 M NaOH solution:

(a) 3×10^{-9}

(b) 1.732×10^{-9}

(c) 8

(d) 10

A. 3×10^{-9}

B. 1.732×10^{-9}

C. 8

D. 10

Answer: B



[Watch Video Solution](#)

73. When a salt of weak acid and weak base is dissolved in water, the pH of the resulting solution will be :

(a) be 7

(b) be greater than 7

(c) be less than 7

(d) depend upon K_a and K_b values

A. be 7

B. be greater than 7

C. be less than 7

D. depend upon K_a and K_b values

Answer: D



Watch Video Solution

74. What will be the pH of an aqueous solution of 1.0 M ammonium formate?

Given : $pK_a = 3.8$ and $pK_b = 4.8$

A. 7.5

B. 3.4

C. 6.5

D. 10.2

Answer: C



Watch Video Solution

75. What will be the pH and $\% \alpha$ (degree of hydrolysis) respectively for the salt BA of $0.1M$ concentration ? Given : K_a for $HA = 10^{-6}$ and K_b for $BOH = 10^{-6}$

(a) 5, 1 %

(b) 7, 10 %

(c) 9, 0.01 %

(d) 7, 0.01 %

A. 5, 1 %

B. 7, 10 %

C. 9, 0.01 %

D. 7, 0.01 %

Answer: B





Watch Video Solution

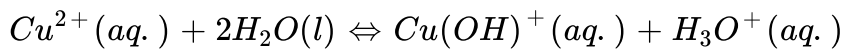
76. The percentage degree of hydrolysis of a salt of weak acid (HA) and weak base (BOH) in its 0.1 M solution is found to be 10 % . If the molarity of the solution is 0.05 M, the percentage hydrolysis of the salt should be :
- A. 5 %
 - B. 10 %
 - C. 20 %
 - D. None of these

Answer: B



Watch Video Solution

77. What is the hydronium ion concentration of a 0.02 M solution of Cu^{2+} solution of copper(II) perchlorate? The acidity constant of the following reaction is 5×10^{-9} .



(a) 1×10^{-5}

(b) 7×10^{-4}

(c) 5×10^{-4}

(d) 1×10^{-4}

A. 1×10^{-5}

B. 7×10^{-4}

C. 5×10^{-4}

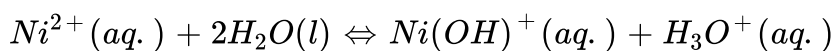
D. 1×10^{-4}

Answer: A



Watch Video Solution

78. What is the acidity constant for the following reaction given that the hydronium ion concentration of a 0.04 M solution of Ni^{2+} solution of nickel(II) perchlorate is 4.5×10^{-6} ?



A. 2×10^{-12}

B. 4×10^{-6}

C. 5×10^{-12}

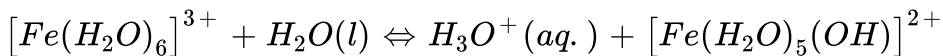
D. 5×10^{-10}

Answer: D

 [Watch Video Solution](#)

79. Calculate the pH at 25°C of a solution that is 0.10 M in $\text{Fe}(\text{NO}_3)_3$.

The acid dissociation constant for the reaction given below is 1.0×10^{-3} .



A. 2.00

B. 2.02

C. 2.30

D. 2.50

Answer: B

 Watch Video Solution

80. Approximate pH of 0.01 M NaHA is calculated by :

($K_{a1} = 10^{-6}$ and $K_{a2} = 10^{-8}$ are ionization constants of H_2A)

A. $pH = 7 + \frac{pK_{a1}}{2} + \frac{\log C}{2}$

B. $pH = 7 - \frac{pK_{a1}}{2} - \frac{\log C}{2}$

C. $pH = \frac{pK_{a1} + pK_{a2}}{2}$

D. None of these

Answer: C

 Watch Video Solution

81. H_3PO_4 is a weak triprotic acid, approximate pH 0.1 M $Na_2HPO_4(aq.)$ is calculated by:

A. $\frac{1}{2}[pK_{a1} + pK_{a2}]$

B. $\frac{1}{2}[pK_{a2} + pK_{a3}]$

C. $\frac{1}{2}[pK_{a1} + pK_{a3}]$

D. $pK_{a1} + pK_{a2}$

Answer: B

 [Watch Video Solution](#)

82. Which of the following is a buffer solution?

A. 500 mL of 0.1 N CH_3COOH + 500 mL of 0.1 N NaOH

B. 500 mL of 0.1 N CH_3COOH + 500 mL of 0.1 N HCl

C. 500 mL of 0.1 N CH_3COOH + 500 mL of 0.2 N NaOH

D. 500 mL of 0.1 N CH_3COOH +500 mL of 0.1 N $NaOH$

Answer: D

 [Watch Video Solution](#)

83. If 20 mL of 0.1 M NaOH is added to 30 mL of 0.2 M CH_3COOH ($pK_a = 4.74$), the pH of the resulting solution is :

A. 4.44

B. 9.56

C. 8.96

D. 9.26

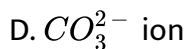
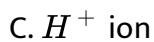
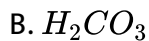
Answer: A



[Watch Video Solution](#)

84. $H_2CO_3 + NaHCO_3$ found in blood helps in maintaining pH of the blood close to 7.4. An excess of acid entering the blood stream is removed by:

A. HCO_3^-



Answer: A

 [Watch Video Solution](#)

85. 100mL of 0.02M benzoic acid ($pK_a = 4.2$) is titrated using 0.02M NaOH . pH values after 50mL and 100mL of NaOH have been added are

A. 3.50, 7

B. 4.2, 7

C. 4.2, 8.1

D. 4.2, 8.25

Answer: C



[Watch Video Solution](#)

86. What is the pH of a solution of 0.28 M acid and 0.84 M of its conjugate base if the ionization constant of acid is 4×10^{-4} ?

- A. 3.88
- B. 3.34
- C. 7
- D. 10.12

Answer: A



[Watch Video Solution](#)

87. The toxic compound 2,4-dinitrophenol has $K_a = 10^{-4}$. In an experiment, a buffer solution of 2,4-dinitrophenol was prepared with the pH adjusted to 5. Calculate the ratio of the concentrations of the dissociated ion to the undissociated acid:

A. 0.01

B. 0.1

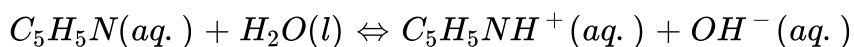
C. 10

D. 100

Answer: C

 [Watch Video Solution](#)

88. Equilibrium constant for the following reaction is 1×10^{-9} :



Determine the moles of pyridinium chloride ($C_5H_5N \cdot HCl$) is added to 500ml of 0.4M of pyridine (C_5H_5N) obtain a buffer solution of pH=5 :

A. 0.1 mole

B. 0.2 mole

C. 0.3 mole

D. 0.4 mole

Answer: B

 [Watch Video Solution](#)

89. Which one of the following mixture does not act as a buffer solution?

- A. Boric acid and borax
- B. Sodium phosphate & disodium hydrogen phosphate
- C. Sodium propionate and propionic acid
- D. Sod. Acetate and sodium propionate

Answer: d

 [Watch Video Solution](#)

90. The acid dissociation constant of uric acid is $K_a = 4.0 \times 10^{-6}$ M. The pH of a sample of urine is 6.0. What is the ratio of concentration of urate ion to uric acid in the urine?

(a)2.0

(b)4.0

(c)6.0

(d)0.25

A. 2.0

B. 4.0

C. 6.0

D. 0.25

Answer: B



[Watch Video Solution](#)

91. CH_3NH_2 (0.12 mole, $pK_b=3.3$) is added to 0.08 moles of HCl and the solution is diluted to one litre, resulting pH of solution is :

(a)10.7

(b)3.6

(c)10.4

(d)11.3

A. 10.7

B. 3.6

C. 10.4

D. 11.3

Answer: C



Watch Video Solution

92. An aqueous solution at room temperature contains 0.01 M NH_4Cl and 0.1M NH_4OH ($pK_b = 5$), the pH of the solution is :

a. 7.5

b. 10

c. 6.5

d. 6.8

A. 7.5

B. 6.8

C. 6.5

D. 8.0

Answer: B



Watch Video Solution

93. Which of the following will increase with dilution at a given temperature?

A. pH of 10^{-3} M acetic acid solution

B. pH of 10^{-3} M aniline solution

C. degree of dissociation of 10^{-3} acetic acid

D. degree of dissociation of 10^{-3} M aniline solution

Answer: A,C,D

 [Watch Video Solution](#)

94. A 1L solution contains 0.2M NH_4OH and 0.2M NH_4Cl . If 1.0 mL of 0.001 M HCl is added to it what will be the $[OH^-]$ of the resulting solution ($K_b = 2 \times 10^{-5}$)

A. 2×10^{-5}

B. 5×10^{-10}

C. 2×10^{-3}

D. None of these

Answer: A

 [Watch Video Solution](#)

95. 0.1 M formic acid solution is titrated against 0.1 M NaOH solution. What would be the difference in pH between 1/5 and 4/5 stages of neutralization of acid?

A. $2 \log 3/4$

B. $2 \log 1/5$

C. $\log 1/3$

D. $2 \log 4$

Answer: D



Watch Video Solution

96. The total number of different kind of buffers obtained during the titration of H_3PO_4 with $NaOH$ are:

A. 3

B. 1

C. 2

D. 4

Answer: A

97. A buffer solution is made up of acetic acid [$pK_a = 5$] having conc.=1.5M and sodium acetate having conc.=0.15 M. What is the number OH^- ions present in 1 litre solution?

a. $10^{-10} N_A$

b. $10^{-4} N_A$

c. $10^{-3} N_A$

d. $10^{-6} N_A$

A. $10^{-10} N_A$

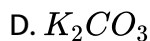
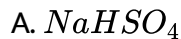
B. $10^{-4} N_A$

C. $10^{-3} N_A$

D. $10^{-6} N_A$

Answer: A

98. The pH of a solution of 0.10 M CH_3COOH increases when which of the following substances is added?

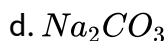
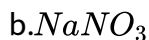


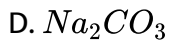
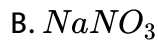
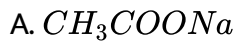
Answer: D



[Watch Video Solution](#)

99. H^+ ion concentration of water does not change by adding:





Answer: B



Watch Video Solution

100. pK_a of NH_4^+ is 9.26. Hence, effective range for $NH_4OH - NH_4Cl$ buffer is about pH:

A. 8.26 to 10.26

B. 4.74 to 5.74

C. 3.74 to 5.74

D. 8.26 to 9.26

Answer: A

 [Watch Video Solution](#)

101. 1.0 L solution is prepared by mixing 61 g benzoic acid ($pK_a = 4.2$) with 72 g of sodium benzoate and then 300 mL 1.0 M HBr solution was added. The pH of final solution is :

- A. 3.6
- B. 3.8
- C. 4.2
- D. 4.8

Answer: A

 [Watch Video Solution](#)

102. The pH of a solution containing 0.4 M HCO_3^- and 0.2 M CO_3^{2-} is :

$$[K_{a1}(H_2CO_3) = 4 \times 10^{-7}, K_{a2}(HCO_3^-) = 4 \times 10^{-11}]$$

A. 10.4

B. 10.1

C. 6.1

D. 10.7

Answer: B



Watch Video Solution

103. The pH of the resultant solution of 20 mL of 0.1 M H_3PO_4 and 20 mL of 0.1 M Na_3PO_4 is :

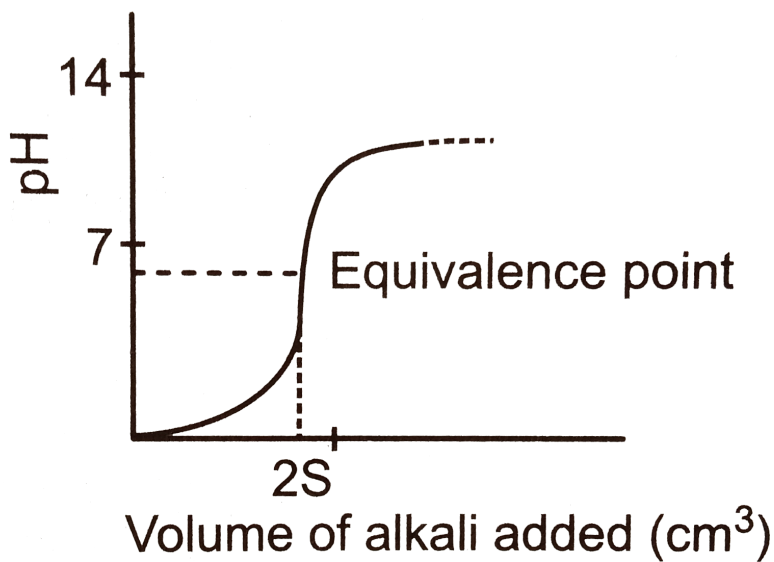
A. $pK_{a1} + \log 2$

B. pK_{a1}

C. pK_{a2}

D. $\frac{pK_{a1} + pK_{a2}}{2}$

Answer: C

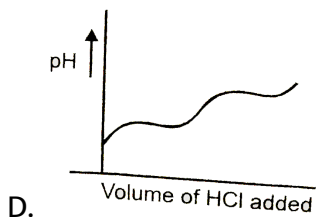
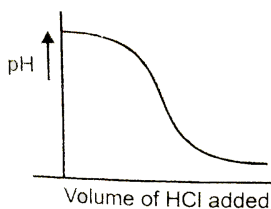
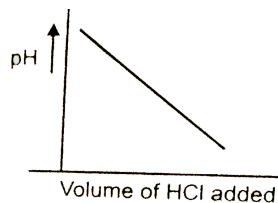
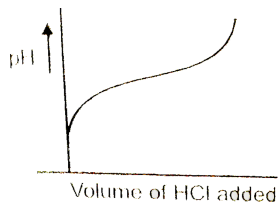


104.

The graph represents the titration curve for :

- a. Strong acid and strong base
- b. Strong acid and weak base
- c. Weak acid and strong base
- d. Weak acid and weak base

105. When 100 mL of 0.1 M NaCN solution is titrated with 0.1 M HCl solution the variation of pH of solution with volume of HCl added will be :



Answer: C

 [Watch Video Solution](#)

106. The best indicator for the detection of the end point in the titration of a weak acid and a strong base is

- A. Methyl orange (3.1 to 4.4)
- B. Methyl red (4.2 to 6.3)
- C. Bromothymol blue (6 to 7.6)
- D. Phenolphthalein (8.2 to 10)

Answer: D



[Watch Video Solution](#)

107. Select the best indicator from the given table for titration of 20 mL of 0.02 M CH_3COOH with 0.02 M $NaOH$. Given $pK_a(CH_3COOH) = 4.74$:

Indicator	pH range
(I), Bromothymol blue	6.0-7.6
(II), Thymolphthalein	9.3-10.5
(III), Malachite green	11.4-13
(IV), M-Cresol purple	7.4-9.0

A. I

B. II

C. III

D. IV

Answer: D



Watch Video Solution

108. Bromothymol blue is an indicator with a K_a value of 6×10^{-5} . What % of this indicator is in its basic form at a pH of 5 ?

A. 40

B. 85.7

C. 14.3

D. 60

Answer: B

 [Watch Video Solution](#)

109. An acid-base indicator has a K_a of 3.0×10^{-5} . The acid form of the indicator is red and the basic form is blue. (a) By how much must the pH change in order to change the indicator from 75 % red to 75 % blue?

A. $8 \times 10^{-5} M$

B. $9 \times 10^{-5} M$

C. $1 \times 10^{-5} M$

D. $3 \times 10^{-4} M$

Answer: A

 [Watch Video Solution](#)

110. An acid-base indicator which is a weak acid has a pK_{In} value =5.45. At what concentration ratio of sodium acetate to acetic acid would the indicator show a colour half-way between those of its acid and conjugate

base forms ?

[pK_a of acetic acid =4.75, $\log 2=0.3$]

A. 4: 1

B. 6: 1

C. 5: 1

D. 3: 1

Answer: C



Watch Video Solution

111. A 20.0 mL sample of a 0.20 M solution of the weak diprotic acid H_2A is titrated with 0.250 M NaOH. The concentration of solution at the second equivalent point is:

A. 0.10 M NaHA

B. $0.153MN_{a_2}A$

C. $0.10MN_{a_2}A$

D. $0.0769MN_{a_2}A$

Answer: D

 [Watch Video Solution](#)

112. During the titration of a weak diprotic acid (H_2A) against a strong base ($NaOH$), the pH of the solution half-way to the first equivalent point and that at the first equivalent point are given respectively by:

A. pK_{a1} and $pK_{a1} + pK_{a2}$

B. $\sqrt{K_{a1}C}$ and $\frac{pK_{a1} + pK_{a2}}{2}$

C. pK_{a1} and $\frac{pK_{a1} + pK_{a2}}{2}$

D. pK_{a1} and pK_{a2}

Answer: C

 [Watch Video Solution](#)

113. In which of the following cases is the solution of $AgCl$ unsaturated?

A. $[Ag^+][Cl^-] < K_{sp}$

B. $[Ag^+][Cl^-] > K_{sp}$

C. $[Ag^+][Cl^-] = K_{sp}$

D. $[Ag^+][Cl^-] \leq K_{sp}$

Answer: A



Watch Video Solution

114. When equal volumes of following solution are mixed, precipitation of $AgCl$?

($K_{sp} = 1.8 \times 10^{-10}$) will occur only with

A. $10^{-4}M(Ag^+)$ and $10^{-4}M(Cl^-)$

B. $10^{-5}M(Ag^+)$ and $10^{-5}M(Cl^-)$

C. $10^{-5}M(Ag^+)$ and $10^{-6}M(Cl^-)$

D. $10^{-10}M(Ag^+)$ and $10^{-10}M(Cl^-)$

Answer: A



Watch Video Solution

115. Choose the correct set of True/False for following statements:

(i) Silver chloride is more soluble in very concentrated sodium chloride solution than in pure water.

(ii) The pH of a buffer solution does not change on addition of small amount of an acid or a base.

(iii) Addition of NH_4Cl does not affect the pH of a solution of NH_4OH

(iv) Degree of hydrolysis of ammonium acetate does not depend upon the concentration of ammonium acetate solution.

(v) A mixture of acetic acid and sodium acetate can act as buffer solution.

A. TTF TT

B. FTTF F

C. TFTFT

D. FTTTT

Answer: D

 [Watch Video Solution](#)

116. A 1 litre solution containing NH_4Cl and NH_4OH has hydroxide ion ion concentration of 10^{-6} mol/litre. Which of the following hydroxides could be precipitated when the solution is added to 1 litre solution of 0.1 M metal ions?

- (I) $Ba(OH)_2$ ($K_{sp} = 5 \times 10^{-3}$), (II) $Ni(OH)_2$ ($K_{sp} = 1.6 \times 10^{-16}$)
(III) $Mn(OH)_2$ ($K_{sp} = 2 \times 10^{-13}$), (IV) $Fe(OH)_2$ ($K_{sp} = 8 \times 10^{-16}$)

A. I,II,IV

B. IV

C. II and IV

D. II,III,IV

Answer: C



Watch Video Solution

117. 150 mL of 0.0008 M ammonium sulphate is mixed with 50 mL of 0.04 M calcium nitrate. The ionic product of $CaSO_4$ will be :

($K_{sp} = 2.4 \times 10^{-5}$ for $CaSO_4$)

A. $< K_{sp}$

B. $> K_{sp}$

C. $\approx K_{sp}$

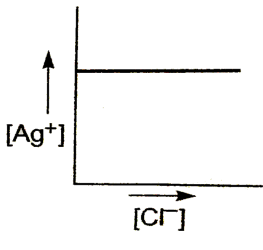
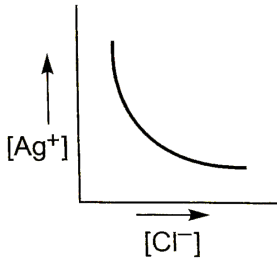
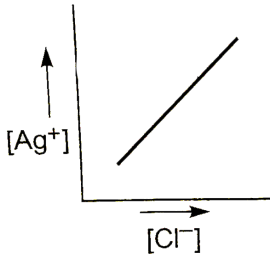
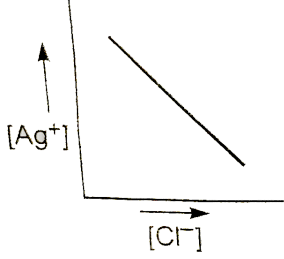
D. None of these

Answer: A



Watch Video Solution

118. In a saturated solution of $AgCl$, $NaCl$ is added gradually. The concentration of Ag^+ is plotted against the concentration of Cl^- . The graph appears as :



Answer: C

 [Watch Video Solution](#)

119. K_{sp} of $AgCl$ is 1×10^{-10} . Its solubility in $0.1\text{ M } KNO_3$ will be :

- A. 10^{-5} moles/litre
- B. $> 10^{-5}$ moles/litre
- C. $< 10^{-5}$ moles/litre
- D. None of these

Answer: A



[Watch Video Solution](#)

120. 50 mL of a solution containing 10^{-3} mole of Ag^+ is mixed with 50 mL of a 0.1 M HCl solution. How much Ag^+ remains in solution ?

(K_{sp} of $AgCl = 1.0 \times 10^{-10}$)

- A. 2.5×10^{-9}
- B. 2.5×10^{-7}
- C. 2.5×10^{-8}

D. 2.5×10^{-10}

Answer: A

 [Watch Video Solution](#)

121. At a certain temperature, the solubility of the salt A_xB_y is S moles per litre. The general expression for the solubility product will be

A. S^2

B. $x^y y^x \cdot S^{x+y}$

C. $x^x y^y \cdot S^{x+y}$

D. S^{x+y}

Answer: C

 [Watch Video Solution](#)

122. What is the molarity of a saturated solution of $CaCO_3$?

$$(K_{sp} = 2.8 \times 10^{-9})$$

A. 2.6×10^{-5}

B. 2.8×10^{-9}

C. 5.2×10^{-5}

D. 5.6×10^{-9}

Answer: C



Watch Video Solution

123. K_{sp} of $Zr_3(PO_4)_4$ in terms of solubility (S) is :

A. $108S^7$

B. $4S^3$

C. $6912S^7$

D. None of these

Answer: C



Watch Video Solution

124. The solubility of electrolytes MX_1 , MX_2 and MX_3 is 1×10^{-3} moles per litre. Hence their respective solubility products are :

A. 10×10^{-6} , 4×10^{-9} , 27×10^{-12}

B. 10^{-9} , 4×10^{-9} , 32×10^{-12}

C. 10^{-9} , 8×10^{-8} , 32×10^{-12}

D. None of these

Answer: A



Watch Video Solution

125. A saturated solution of $Ca_3(PO_4)_2$ has $[Ca^{2+}] = 2 \times 10^{-8}$ M and $[PO_4^{3-}] = 1.6 \times 10^{-5}$ M K_{sp} of $Ca_3(PO_4)_2$ is :

A. 3.2×10^{-13}

B. 3.2×10^{-34}

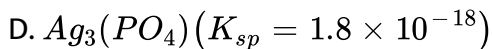
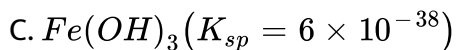
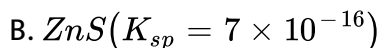
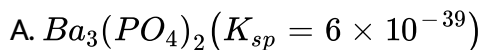
C. 2.048×10^{-33}

D. None of these

Answer: C

 [Watch Video Solution](#)

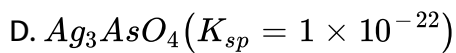
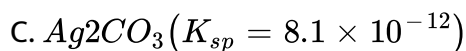
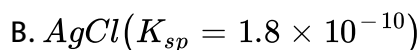
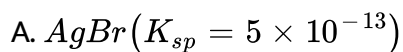
126. Which of the following is most soluble in water?



Answer: D

 [Watch Video Solution](#)

127. Silver ions are added to a solution with $[Br^-] = [Cl^-] = [CO_3^{2-}] = [AsO_4^{3-}] = 0.1M$. Which compound will precipitate with lowest $[Ag^+]$?



Answer: A



Watch Video Solution

128. The solubility of different sparingly soluble salts are given as under :

S. No	Formula	Type	Solubility product
-------	---------	------	--------------------

(1)	AB		4.0×10^{-20}
-----	----	--	-----------------------

(2)	A_2B		3.2×10^{-11}
-----	--------	--	-----------------------

(3)	AB_3		2.7×10^{-31}
-----	--------	--	-----------------------

The correct increasing order of solubility is :

A. 1,3,2

B. 2,1,3

C. 1,2,3

D. 3,1,2

Answer: A



[Watch Video Solution](#)

129. If K_{sp} for $HgSO_4$ is 6.4×10^{-5} , then solubility of this substance in mole per m^3 is

A. 8×10^{-3}

B. 6.4×10^{-5}

C. 8×10^{-6}

D. None of these

Answer: A



Watch Video Solution

130. The solubility of $Ba_3(AsO_4)_2$ (formula mass=690) is 6.9×10^{-2} g//100 mL. What is the K_{sp} ?

A. 1.08×10^{-11}

B. 1.08×10^{-13}

C. 1.0×10^{-15}

D. 6.0×10^{-13}

Answer: B



Watch Video Solution

131. The solubility of $AgBrO_3$ (formula mass=236) is 0.0072 g in 1000 mL.

What is the K_{sp} ?

A. 2.2×10^{-8}

B. 3.0×10^{-10}

C. 3.0×10^{-5}

D. 9.3×10^{-10}

Answer: D

 [Watch Video Solution](#)

132. The solubility of PbF_2 (formula mass =245) is 0.46 g/L. What is the solubility product?

A. 1.1×10^{-10}

B. 2.6×10^{-8}

C. 1.1×10^{-7}

D. 6.8×10^9

Answer: B

 [Watch Video Solution](#)

133. How many grams of MgC_2O_4 (formula mass =112) will dissolve in 1.5 L of water?

$$(K_{sp} = 8.1 \times 10^{-5})$$

- A. 1.0
- B. 1.29
- C. 1.512
- D. 4.65

Answer: C

 [Watch Video Solution](#)

134. What is the molarity of F^- ions in a saturated solution of BaF_2 ?

$$(K_{sp} = 1.0 \times 10^{-6})$$

A. 1.0×10^{-2}

B. 1.0×10^{-3}

C. 1.26×10^{-2}

D. 6.3×10^{-3}

Answer: D



Watch Video Solution

135. What is the molarity of F^- in a saturated solution of LnF_3 ?

$(K_{sp} = 7.9 \times 10^{-10})$

A. 2.3×10^{-3}

B. 8.3×10^{-3}

C. 1.0×10^{-3}

D. 7.0×10^{-3}

Answer: C

 [Watch Video Solution](#)

136. What is the pH of a saturated solution of $\text{Cu}(\text{OH})_2$?

$$(K_{sp} = 2.6 \times 10^{-19})$$

- A. 6.1
- B. 7.30
- C. 8.42
- D. 7.90

Answer: D

 [Watch Video Solution](#)

137. The solubility product of AgCl is 10^{-10}M^2 . The minimum volume (in m^3) of water required to dissolve 14.35mg of AgCl is approximately :

- A. 0.01

B. 0.1

C. 100

D. 10

Answer: A



[Watch Video Solution](#)

138. What is the molar solubility of $Fe(O)_2$ ($K_{sp}=8.0 \times 10^{-16}$) at pH 13.0?

A. 8.0×10^{-18}

B. 8.0×10^{-15}

C. 8.0×10^{-17}

D. 8.0×10^{-14}

Answer: D



[Watch Video Solution](#)

139. What is the minimum pH necessary to cause a precipitate of $Pb(OH)_2$ ($K_{sp} = 1.2 \times 10^{-5}$) to form in a 0.12 M $PbCl_2$ solution?

- A. 12.4
- B. 10.8
- C. 12.0
- D. 11.1

Answer: C

 [Watch Video Solution](#)

140. Which of the following would increase the solubility of $Pb(OH)_2$?

- A. Add hydrochloric acid
- B. Add a solution of $Pb(NO_3)_2$
- C. Add a solution of NaOH

D. None of the above-the solubility a compound is constant a constant temperature

Answer: A

 [Watch Video Solution](#)

141. What is the molar solubility of Ag_2CO_3 ($K_{sp} = 4 \times 10^{-13}$) in $0.1MNa_2CO_3$ solution ?

A. 10^{-6}

B. 10^{-7}

C. 2×10^{-6}

D. 2×10^{-7}

Answer: A

 [Watch Video Solution](#)

142. What is the concentration of Pb^{2+} when $PbSO_4$ ($K_{sp} = 1.8 \times 10^{-8}$) begins to precipitate from a solution that is 0.0045 M in SO_4^{2-} ?

A. 4.0×10^{-8} M

B. 1.0×10^{-6} M

C. 2.0×10^{-8} M

D. 4.0×10^{-6} M

Answer: D



Watch Video Solution

143. What is the concentration of Ba^{2+} when BaF_2 ($K_{sp} = 1.0 \times 10^{-6}$) begins to precipitate from a solution that is 0.30 M F^- ?

A. 9.0×10^{-7}

B. 3.3×10^{-5}

C. 1.1×10^{-5}

D. 3.0×10^{-5}

Answer: C



Watch Video Solution

144. Solubility of AgCl in 0.2 M NaCl is x and that in 0.1 M AgNO_3 is y .

Then which of the following is correct?

A. $x = y$

B. $x > y$

C. $x < y$

D. We cannot predict

Answer: C



Watch Video Solution

145. What is the molarity of $Fe(CN)_6^{4-}$ in a saturated solution of $Ag_4[Fe(CN)_6]$?

$$(K_{sp} = 1.6 \times 10^{-41})$$

A. 1.6×10^{-8}

B. 5.2×10^{-8}

C. 2.0×10^{-8}

D. 2.3×10^{-9}

Answer: D



Watch Video Solution

146. At 25°C , K_{sp} for $PbBr_2$ is equal to 8×10^{-5} . If the salt is 80 % dissociated, What is the solubility of $PbBr_2$ in mol//litre?

A. $\left[\frac{10^{-4}}{1.6 \times 1.6} \right]^{1/2}$

B. $\left[\frac{10^{-4}}{1.6 \times 1.6} \right]^{1/3}$

- C. $\left[\frac{10^{-4}}{0.8 \times 0.8} \right]^{1/3}$
- D. $\left[\frac{10^{-5}}{1.6 \times 1.6} \right]^{1/2}$

Answer: B

 [Watch Video Solution](#)

147. What is the molar solubility of $Mn(OH)_2$ ($K_{sp} = 4.5 \times 10^{-14}$) in a buffer solution containing equal amounts of NH_4^+ and NH_3 ($K_b = 1.8 \times 10^{-5}$)?

- A. 3.0×10^{-4}
- B. 1.38×10^{-4}
- C. 1.38×10^{-3}
- D. 7.3×10^{-4}

Answer: B

 [Watch Video Solution](#)

148. Find moles of NH_4Cl required to prevent $Mg(OH)_2$ from precipitating in a litre of solution which contains 0.02 mole NH_3 and 0.001 mole Mg^{2+} ions.

Given : $K_b(NH_3) = 10^{-5}$, $K_{sp}[Mg(OH)_2] = 10^{-11}$.

A. 10^{-4}

B. 2×10^{-3}

C. 0.02

D. 0.1

Answer: B



[Watch Video Solution](#)

149. What mass of AgI will dissolve in 1.0 L of 1.0 M NH_3 ? Neglect change in conc. Of NH_3 .

[Given: $K_{sp}(AgI) = 1.5 \times 10^{-16}$), $K_f[Ag(NH_3)_2^+] = 1.6 \times 10^7$], (At.

Mass Ag=108, I=127)

A. 4.9×10^{-5} g

B. 0.0056 g

C. 0.035 g

D. 0.011 g

Answer: D



Watch Video Solution

150. Consider the following statement and select correct option:

(I) K_{sp} of $Fe(OH)_3$ in aqueous solution is 3.8×10^{-38} at 298 K. The concentration of Fe^+ will increase when $[H^+]$ ion concentration decreases.

(II) In a mixture of NH_4Cl and NH_4OH in water, a further amount of NH_4Cl is added. The pH of the mixture will decrease.

(III) An aqueous solution of each of the following salt (NH_4I , $HCOOK$) will be basic, acidic respectively.

- A. only I is correct
- B. only II is correct
- C. only III is correct
- D. II and III are correct

Answer: B



[Watch Video Solution](#)

Level 2

1. Equilibrium constants of T_2O (T or 3_1H is an isotope of 1_1H) and H_2O are different at 298 K. Let at 298 K pure T_2O has pT (like pH) is 7.62. The pT of a solution prepared by adding 10 mL of 0.2 M TCl to 15 mL of 0.25 M NaOT is:

A. $2 - \log 7$

B. $14 + \log 7$

C. $13.24 - \log 7$

D. $13.24 + \log 7$

Answer: D



Watch Video Solution

2. Liquid NH_3 dissociation to a slight extent, At a certain temp. its self dissociation constant $K_{SDC(NH_3)} = 10^{-30}$. The number of NH_4^+ ions are present per $100cm^3$ of pure liquid are :

A. 10^{-15}

B. 6.022×10^8

C. 6.022×10^7

D. 6.022×10^6

Answer: C



Watch Video Solution

3. To what volume of 10 litre of 0.5 M CH_3COOH ($K_a = 1.8 \times 10^{-5}$) be diluted in order to double the hydroxide ion concentration :

(a) 20L

(b) 30L

(c) 40L

(d) None of these

A. 20 L

B. 30 L

C. 40 L

D. None of these

Answer: C



Watch Video Solution

4. 20 mL of 0.1 M weak acid HA ($K_a = 10^{-5}$) is mixed with solution of 10 mL of 0.3 M HCl and 10 mL of 0.1 M NaOH. Find the value of $\frac{[A^-]}{[HA] + [A^-]}$ in the resulting solution :

A. 2×10^{-4}

B. 2×10^{-5}

C. 2×10^{-3}

D. 0.05

Answer: A



[Watch Video Solution](#)

5. What concentration of FCH_2COOH ($K_a = 2.6 \times 10^{-3}$) is needed so that $[H^+] = 2 \times 10^{-3}$?

A. 2×10^{-3} M

B. $2.6 \times 10^{-3} \text{ M}$

C. $5.2 \times 10^{-3} \text{ M}$

D. $3.53 \times 10^{-3} \text{ M}$

Answer: D



Watch Video Solution

6. Calculate the ratio of $[HXOO^-]$ and $[F^-]$ in a mixture of 0.2 M HCOOH ($K_a = 2 \times 10^{-4}$) and 0.1 M HF ($K_a = 6.6 \times 10^{-4}$):

(a) 1 : 6.6

(b) 1 : 3.3

(c) 2 : 3.3

(d) 3.3 : 2

A. 1 : 6.6

B. 1 : 3.3

C. 2 : 3.3

D. 3.3: 2

Answer: C

 [Watch Video Solution](#)

7. If first dissociation of $X(OH)_3$ is 100 % where as second dissociation is 50 % and third dissociation is negligible then the pH $4 \times 10^{-3} M X(OH)_3$ is :

A. 11.78

B. 10.78

C. 2.5

D. 2.22

Answer: A

 [Watch Video Solution](#)

8. H_3A is a weak triprotic acid ($K_{a1} = 10^{-5}$, $K_{a2} = 10^{-9}$, $K_{a3} = 10^{-13}$)

What is the value of pX of 0.1 M H_3A (aq.) solution ? Where $pX = -\log X$ and

$$X = \frac{[A^{3-}]}{[HA^{2-}]}$$

A. 7

B. 8

C. 9

D. 10

Answer: D



[Watch Video Solution](#)

9. Calcium lactate is a salt of weak organic acid and strong base represented as $Ca(LaC)_2$. A saturated solution of $Ca(LaC)_2$ contains 0.6 mole in 2 litre solution. pOH of solution is 5.60. If 90 % dissociation of the salt takes place then what is pK_a of lactic acid?

A. $2.8 - \log(0.54)$

B. $2.8 + \log(0.54)$

C. $2.8 + \log(0.27)$

D. None the these

Answer: A

 [Watch Video Solution](#)

10. What is the concentration of $CH_3COOH(aq.)$ in a solution prepared by dissolving 0.01 mole of $NH_4^+CH_3COO^-$ in 1 L H_2O ?

$[K_a(CH_3COOH) = 1.8 \times 10^{-5}, K_b(NH_4OH) = 1.8 \times 10^{-5}]$

A. 5.55×10^{-5}

B. 0.10

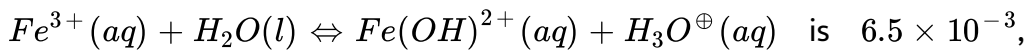
C. 6.4×10^{-4}

D. 5.55×10^{-3}

Answer: A

[Watch Video Solution](#)

11. K_a for the reaction,



what is the maximum pH value which could be used so that at least 80 % of the total iron (*III*) in a dilute solution exists as Fe^{3+} ?

A. 2

B. 2.41

C. 2.79

D. 1.60

Answer: D

[Watch Video Solution](#)

12. $Fe(OH)_2$ is diacidic base has $K_{b1} = 10^{-4}$ and $K_{b2} = 2.5 \times 10^{-6}$

What is the concentration of $Fe(OH)_2$ in 0.1 M $Fe(NO_3)_2$ solution?

A. 4×10^{-9}

B. 2.5×10^{-6}

C. 10^{-10}

D. 10^{-14}

Answer: C



Watch Video Solution

13. How many gm of solid KOH must be added to 100 mL of a buffer solution to make the pH of solution 6.0, if it is 0.1 M each w.r.t. acid HA and salt K A.

[Given: $pK_a(HA) = 5$]

A. 0.458

B. 0.327

C. 5.19

D. None of these

Answer: A

 [Watch Video Solution](#)

14. Fixed volume of 0.1 M benzoic acid ($pK_a = 4.2$) solution is added into 0.2 M sodium benzoate solution and formed a 300 mL, resultant acidic buffer solution. If pH of this buffer solution is 4.5 then find added volume of benzoic acid :

- A. 100 mL
- B. 150 mL
- C. 200 mL
- D. None of these

Answer: B

 [Watch Video Solution](#)

15. A 1.025 g sample containing a weak acid HX (mol. Mass=82) is dissolved in 60 mL. water and titrated with 0.25 M NaOH. When half of the acid was neutralised the pH was found to be 5.0 and at the equivalence point the pH is 9.0. Calculate mass percentage of HX in sample :

a.50 %

b.75 %

c.80 %

d.None

A. 50 %

B. 75 %

C. 80 %

D. None of these

Answer: C



Watch Video Solution

16. Which of the following expression for % dissociation of a monoacidic base (BOH) in aqueous solution at appreciable concentration is not correct?

(a) $100 \times \sqrt{\frac{K_b}{c}}$

(b) $\frac{1}{1 + 10^{(pK_b - pOH)}}$

(c) $\frac{K_w[H^+]}{K_b + K_w}$

(d) $\frac{K_b}{K_b + [OH^-]}$

A. $100 \times \sqrt{\frac{K_b}{c}}$

B. $\frac{1}{1 + 10^{(pK_b - pOH)}}$

C. $\frac{K_w[H^+]}{K_b + K_w}$

D. $\frac{K_b}{K_b + [OH^-]}$

Answer: C



Watch Video Solution

17. A solution of weak acid HA was titrated with base NaOH. The equivalent point was reached when 40 mL of 0.1 M NaOH has been added. Now 20 mL of 0.1 M HCl were added to titrated solution, the pH was found to be 5.0. What will be the pH of the solution obtained by mixing 20 mL of 0.2 M NaOH and 20 mL of 0.2 M HA?

A. 7

B. 9

C. 11

D. None of these

Answer: B



[Watch Video Solution](#)

18. A buffer solution 0.04 M in Na_2HPO_4 and 0.02 in Na_3PO_4 is prepared. The electrolytic oxidation of 1.0 milli-mole of the organic compound RNHOH is carried out in 100 mL of the buffer. The reaction is

$RNHOH + H_2O \rightarrow RNO_2 + 4H^+ + 4e^-$ The approximate pH of solution after the oxidation is complete is :

[Given: f or H_3PO_4 , $pK_{a1} = 2.2$, $pK_{a2} = 7.20$, $pK_{a3} = 12$]

(a) 6.90

(b) 7.20

(c) 7.5

(d) None of these

A. 6.90

B. 7.20

C. 7.5

D. None of these

Answer: C



[Watch Video Solution](#)

19. When a 20 mL of 0.08 M weak base BOH is titrated with 0.08 M HCl, the pH of the solution at the end point is 5. What will be the pOH if 10 mL of

0.04 M NaOH is added to the resulting solution?

[Given: $\log 2 = 0.30$ and $\log 3 = 0.48$]

A. 5.40

B. 5.88

C. 4.92

D. None of these

Answer: B



[Watch Video Solution](#)

20. Calculate approximate pH of the resultant solution formed by titration of 25 mL of 0.04 M Na_2CO_3 with 50 mL of 0.025 M HCl.

[Given: $pK_{a1} = 6.4$ and $pK_{a2} = 10.3$ for H_2CO_3]

A. 5.92

B. 6.88

C. 6.4

D. 5.88

Answer: B

 [Watch Video Solution](#)

21. In the titration of solution of a weak acid HA and NaOH, the pH is 5.0 after 10 mL of NaOH solution has been added and 5.60 after 20 mL NaOH has been added.

What is the value of pK_a for HA?

A. 5.15

B. 5.3

C. 5.6

D. None of these

Answer: B

 [Watch Video Solution](#)

22. 50 mL of 0.05 M Na_2CO_3 is titrated against 0.1 M HCl. On adding 40 mL of HCl, pH of the solution will be

[Given: For H_2CO_3 , $pK_{a1} = 6.35$, $pK_{a2} = 10.33$, $\log 3 = 0.477$, $\log 2 = 0$]

- A. 6.35
- B. 6.526
- C. 8.34
- D. 6.173

Answer: D



[Watch Video Solution](#)

23. 10 mL of 0.1 M tribasic acid H_3A is titrated with 0.1 M NaOH solution.

What is the ratio of $\frac{[H_3A]}{[A^{3-}]}$ at 2nd equivalence points?

[Given: $K_{a1} = 10^{-3}$, $K_{a2} = 10^{-8}$, $K_{a3} = 10^{-12}$]

(a) $\cong 10^{-4}$

(b) $\cong 10^{+4}$

(c) $\cong 10^{-7}$

(d) $\cong 10^{+6}$

A. $\cong 10^{-4}$

B. $\cong 10^{+4}$

C. $\cong 10^{-7}$

D. $\cong 10^{+6}$

Answer: C



Watch Video Solution

24. A_3B_2 is a sparingly soluble salt with molar mass $M(\text{gmol}^{-1})$ and solubility $x \text{ gm litre}^{-1}$, the ratio of the molar concentration of B^{3-} to the solubility product of the salt is : —

A. $108 \frac{x^5}{m^5}$

B. $\frac{1}{108} \frac{M^4}{x^4}$

C. $\frac{1}{54} \frac{M^4}{x^4}$

D. None of these

Answer: C

 [Watch Video Solution](#)

25. A solution is 0.10 M $Ba(NO_3)_2$ and 0.10 M $Sr(NO_3)_2$. If solid Na_2CrO_4 is added to the solution, what is $[Ba^{2+}]$ when $SrCrO_4$ begins to precipitate?

$$[K_{sp}(BaCrO_4) = 1.2 \times 10^{-10}, K_{sp}(SrCrO_4) = 3.5 \times 10^{-5}]$$

A. 7.4×10^{-7}

B. 2.0×10^{-7}

C. 6.1×10^{-7}

D. 3.4×10^{-7}

Answer: D

 [Watch Video Solution](#)

26. A solution is 0.01 M KI and 0.1 M KCl. If solid $AgNO_3$ is added to the solution, what is the $[I^-]$ when AgCl begins to precipitate?

$$[K_{SP}(AgI) = 1.5 \times 10^{-16}, K_{SP}(AgCl) = 1.8 \times 10^{-10}]$$

A. 3.5×10^{-7}

B. 6.1×10^{-8}

C. 2.2×10^{-7}

D. 8.3×10^{-8}

Answer: D



Watch Video Solution

27. A solution of 0.1 M in Cl^- and 10^{-4} M CrO_4^{2-} . If solid $AgNO_3$ is gradually added to this solution, what will be the concentration of Cl^- when Ag_2CrO_4 begins to precipitate?

$$[K_{sp}(AgCl) = 10^{-10} M^2, K_{sp}(Ag_2CrO_4) = 10^{-12} M^3]$$

A. 10^{-6} M

B. 10^{-4} M

C. 10^{-5} M

D. 10^{-9} M

Answer: A

 [Watch Video Solution](#)

28. If 500 mL of 0.4 M $AgNO_3$ is mixed with 500 mL of 2 M NH_3 solution then what is the concentration of $Ag(NH_3)^+$ in solution?

Given : $K_{f1}[Ag(NH_3)]^+ = 10^3$, $K_{f2}[Ag(NH_3)_2]^+ = 10^4$

A. 3.33×10^{-7} M

B. 3.33×10^{-5} M

C. 3×10^{-4} M

D. 10^{-7} M

Answer: B

 [Watch Video Solution](#)

29. The simultaneous solubility of $AgCN$ ($K_{sp} = 2.5 \times 10^{-16}$) and $AgCl$ ($K_{sp} = 1.6 \times 10^{-10}$) in 1.0 M $NH_3(aq.)$ are respectively:

[Given: $K_{f1} [Ag(NH_3)_2^+] = 10^7$]

A. 0.037, 5.78×10^{-8}

B. 5.78×10^{-8} , 0.037

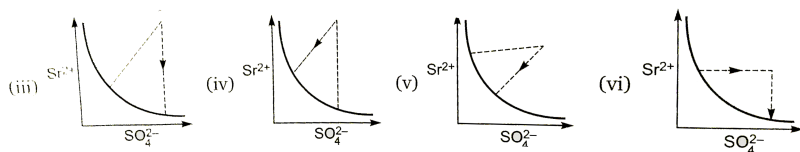
C. 0.04, 6.25×10^{-8}

D. 1.58×10^{-3} , 1.26×10^{-5}

Answer: B

 [Watch Video Solution](#)

30. There exist an equilibrium between solid $SrSO_4$ and Sr^{2+} and SO_4^{2-} ion in aqueous medium. The possible equilibrium states are shown in figure as thick line. Now, if equilibrium is disturbed by addition of (a) $Sr(NO_3)_2$ and (b) K_2SO_4 and dotted line represent approach of system towards equilibrium. Match the column given below :



(I) addition of $Sr(NO_3)_2$

(II) addition of K_2SO_4

A. (I) (iii), (II) (iv)

B. (I) (iv), (II) (v)

C. (I) (vi), (II) (v)

D. (I) (iv), (II) (vi)

Answer: C



Watch Video Solution

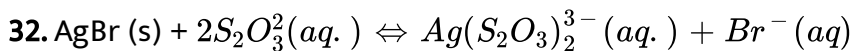
31. Solubility of AgCN is maximum in :

- A. acidic buffer solution
- B. basic buffer solution
- C. in pure water
- D. equal in all solution

Answer: A



Watch Video Solution



[Using: $K_{sp}(\text{AgBr}) = 5 \times 10^{-13}$ $K_f(\text{Ag}(\text{S}_2\text{O}_3)_2^{3-}) = 5 \times 10^{13}$]

What is the molar solubility of AgBr in 0.1 M Na_2SO_3 ?

- A. 0.5 M
- B. 0.45 M
- C. 0.045 M

D. None of these

Answer: C

 [Watch Video Solution](#)

33. What is $[Ag^+]$ in a solution made by dissolving both Ag_2CrO_4 and $Ag_2C_2O_4$ until saturation is reached with respect to both salts ?

$$[K_{sp}(Ag_2C_2O_4) = 2 \times 10^{-11}, \quad K_{sp}(Ag_2CrO_4) = 2 \times 10^{-12}]$$

A. 2.80×10^{-4}

B. 7.6×10^{-5}

C. 6.63×10^{-6}

D. 3.52×10^{-4}

Answer: D

 [Watch Video Solution](#)

34. What is the minimum pH required to prevent the precipitation of ZnS in a solution that is 0.01 M $ZnCl_2$ and saturated with 0.10 M H_2S ?

[Given: $K_{sp} = 10^{-21}$, $K_{a1} \times K_{a2} = 10^{-20}$]

A. 0

B. 1

C. 2

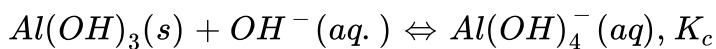
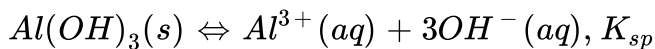
D. 4

Answer: B



Watch Video Solution

35. The $Al(OH)_3$ is involved in the following two equilibria,



Which of the following relationship is correct at which solubility is minimum?

A. $[OH^-] = \left(\frac{K_{sp}}{K_c}\right)^{1/3}$

B. $[OH^-] = \left(\frac{K_c}{K_{sp}}\right)^{1/4}$

C. $[OH^-] = \sqrt{\left(\frac{K_{sp}}{K_c}\right)^{1/4}}$

D. None of these

Answer: D



Watch Video Solution

Level 3

1. one litre of an aqueous solution contains 0.15 mole of CH_3COOH ($pK_a = 4.8$) and 0.15 mole of CH_3COONa . After the addition of 0.05 mole of solid NaOH to this solution, the pH will be :

A. 4.5

B. 4.8

C. 5.1

D. 5.4

Answer: C

 [Watch Video Solution](#)

2. Calculate the pH of a solution made by adding 0.01 mole of HCl in 100 mL of a solution which is 0.2 M in NH_3 ($pK_b = 4.74$) and 0.3 M in NH_4^+ :
(Assuming no change in volume)

A. 5.34

B. 8.66

C. 7.46

D. None of these

Answer: B

 [Watch Video Solution](#)

3. Useful buffer range of weak acid HA ($K_a = 10^{-5}$) is :

A. 5 to 7

B. 4 to 6

C. 3 to 6

D. None of these

Answer: B



[Watch Video Solution](#)

4. Solution of a weak acid and its anion (that is, its conjugate base) or of a base and its common cation are buffered. When we add a small amount of acid or base to any one of the, the pH of solution change very little. pH of buffer solution can be computed as for acidic buffer :

$$pH = pK_a + \log \frac{[\text{Conjugate base}]}{[\text{Acid}]}$$

$$\text{for basic buffer : } pOH = pK_b + \log \frac{[\text{Conjugate acid}]}{[\text{Base}]}$$

It is generally accepted that a has useful buffer capacity (pH change

resisting power) provided that the value of $\frac{[\text{salt or conjugate base}]}{[\text{acid}]}$ for acidic buffer lies within the range of 1 : 10 to 1. Buffer capacity is maximum when $[\text{conjugate base}] = [\text{acid}]$

Useful correct statement :

- A. When we add small amount of NaOH in acidic buffer solution, pH of solution increases
- B. When we add small amount of NaOH in basic buffer solution, pH of solution increases
- C. When we add small amount of water in acidic buffer solution, pH of solution decreases
- D. When 100 mL of 0.2 M CH_3COOH react with 200 mL of 0.1 M NaOH buffer solution is

Answer: A

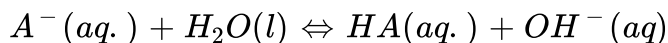


[Watch Video Solution](#)

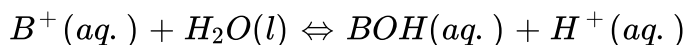
5. Hydrolysis is an acid-based reaction of a cation or anion or both ions of a salt with water. Resultant solution of hydrolysis may be acidic, basic or neutral. The anion A^- which is a weaker base than OH^- and whose conjugate acid HA is stronger than water but weaker than H_3O^+ shows the phenomenon of hydrolysis. Ex: CH_3COO^- , CN^- , NO_2^- etc.

The cation B^+ which is a weaker acid than H_3O^+ and whose conjugate base BOH is stronger than water but weaker than OH^- shows the phenomenon of hydrolysis. Ex: NH_4^+ , $C_6H_5NH_3^+$, $N_2H_5^+$ etc.

The hydrolysis constant of anion and cation are given by



$$K_h = \frac{K_w}{K_a} \Rightarrow \frac{[HA(aq.)][OH^-(aq.)]}{[A^-(aq.)]}$$



$$K_h = \frac{K_w}{K_b} \Rightarrow \frac{[BOH(aq.)][H^+(aq.)]}{[B^+(aq.)]}$$

Which of the following statements is true

A. Weaker the acid, greater the statement is true?

B. Weaker the base, greater will be hydrolysis of its anion

C. Both (a) and (b)

D. None of these

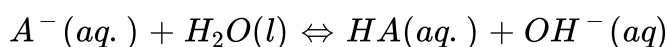
Answer: D

 [Watch Video Solution](#)

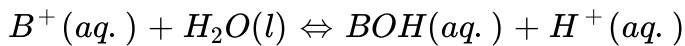
6. Hydrolysis is an acid-based reaction of a cation or anion or both ions of a salt with water, Resultant solution of hydrolysis may be acidic, basic or neutral. The anion A^- which is a weaker base than OH^- and which has its conjugate acid HA stronger than water but weaker than H_3O^+ shown the phenomenon of hydrolysis Ex : CH_3COO^- , CN^- , NO_2^- etc.

The cation B^+ which is a weaker acid than H_3O^+ which is a weaker acid than H_3O^+ and which has its conjugate base BOH stronger than water but weaker than OH^- shown the phenomenon of hydrolysis Ex : NH_4^+ , $C_6H_5NH_3^+$, $N_2H_5^+$ etc.

The hydrolysis constant of anion and cation are given by



$$K_h = \frac{K_w}{K_a} \Rightarrow \frac{[HA(aq.)][OH^-(aq.)]}{[A^-(aq.)]}$$



$$K_h = \frac{K_w}{K_b} \Rightarrow \frac{[BOH(aq.)][H^+(aq.)]}{[B^-(aq.)]}$$

select the correct statement :

A. KCl undergoes hydrolysis

B. $K_h = K_b(A^-)$ and $K_h = K_a(B^+)$

C. 0.1 M solution of NaCN is acidic

D. resultant solution of equal volume of 0.1 M NH_3 and 0.1M HCl is basic

Answer: B

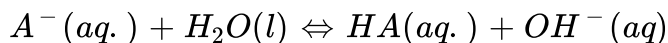
 [Watch Video Solution](#)

7. Hydrolysis is an acid-based reaction of a cation or anion or both ions of a salt with water, Resultant solution of hydrolysis may be acidic, basic or neutral. The anion A^- which is a weaker base than OH^- and which has its conjugate acid HA stronger than water but weaker than H_3O^+ shown

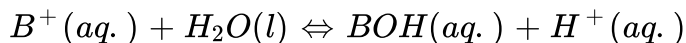
the phenomenon of hydrolysis Ex : CH_3COO^- , CN^- , NO_2^- etc.

The cation B^+ which is a weaker acid than H_3O^+ which is a weaker acid than H_3O^+ and which has its conjugate base BOH stronger than water but weaker than OH^- shown the phenomenon of hydrolysis Ex : NH_4^+ , $C_6H_5NH^+$, $N_2H_5^+$ etc.

The hydrolysis constant of anion and cation are given by



$$K_h = \frac{K_w}{K_a} \Rightarrow \frac{[HA(aq.)][OH^-(aq.)]}{[A^-(aq.)]}$$



$$K_h = \frac{K_w}{K_b} \Rightarrow \frac{[BOH(aq.)][H^+(aq.)]}{[B^+(aq.)]}$$

When pure ammonium chloride is dissolved in pure water, the pH of the resulting is not 7. This is because :

A. Ammonium ions accept protons from water molecules leaving free

OH^- ions in solution

B. ammonium ions donate protons to water molecules forming H_3O^+

ions in solution

- C. Ammonium ions combine with water molecule to give the weak base, ammonium hydroxide
- D. chloride ion made the solution acidic

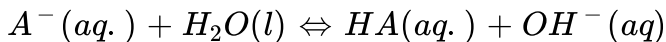
Answer: C

 [Watch Video Solution](#)

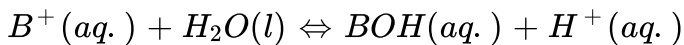
8. Hydrolysis is an acid-base reaction of a cation or anion or both ions of a salt with water. Resultant solution of hydrolysis may be acidic, basic or neutral. The anion A^- which is a weaker base than OH^- and which has its conjugate acid HA stronger than water but weaker than H_3O^+ shows the phenomenon of hydrolysis. Ex: CH_3COO^- , CN^- , NO_2^- etc.

The cation B^+ which is a weaker acid than H_3O^+ which is a weaker acid than H_3O^+ and which has its conjugate base BOH stronger than water but weaker than OH^- shows the phenomenon of hydrolysis. Ex: NH_4^+ , $C_6H_5NH^+$, $N_2H_5^+$ etc.

The hydrolysis constant of anion and cation are given by



$$K_h = \frac{K_w}{K_a} \Rightarrow \frac{[HA(aq.)][OH^{-}(aq.)]}{[A^{-}(aq.)]}$$



$$K_h = \frac{K_w}{K_b} \Rightarrow \frac{[BOH(aq.)][H^{+}(aq.)]}{[B^{-}(aq.)]}$$

Calculate percentage degree of hydrolysis in a 0.1 M solution of CH_3COONa . (K_a of $CH_3COOH = 10^{-5}$)

A. 0.1

B. 0.01

C. 10^{-4}

D. None of these

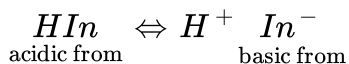
Answer: C



Watch Video Solution

9. Acid-base indicators are either weak organic acids or weak organic bases. Indicator change colour in dilute solution when the hydronium ion

concentration reaches a particular value. For example, phenolphthalein is a colourless substance in any aqueous solution with a pH less than 8.3. In between the pH range 8.3 to 10, transition of colour (colourless to pink) takes place and if pH of solution is greater than 10, solution is dark pink. Considering an acid indicator HIn , the equilibrium involving it and its conjugate base In^- can be represented as :



pH of solution can be computed as :

$$pH = pK_{In} + \log \frac{[In^-]}{[HIn]}$$

In general, transition of colour takes place in between the pH range $pK_{In} \pm 1$.

An indicator is a weak acid and pH range is 4.0 to 6.0. If indicator is 50% ionized in a given solution then what is the ionization constant of the acid ?

A. 10^{-4}

B. 10^{-5}

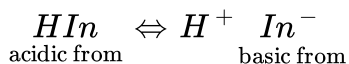
C. 10^{-6}

D. None of these

Answer: B

 Watch Video Solution

10. Acid-base indicators are either weak organic acids or weak organic bases. Indicator change colour in dilute solution when the hydronium ion concentration reaches a particular value. For example, phenolphthalein is a colourless substance in any aqueous solution with a pH less than 8.3. In between the pH range 8.3 to 10, transition of colour (colourless to pink) takes place and if pH of solution is greater than 10 solution is dark pink. Considering an acid indicator HIn , the equilibrium involving it and its conjugate base In^- can be represented as :



pH of solution can be computed as :

$$pH = pK_{In} + \log \frac{[In^-]}{[HIn]}$$

In general, transition of colour takes place in between the pH range $pK_{In} \pm 1$.

Select the correct statement (s) :

- A. At midway in the transition of an acidic indicator, $pH = pK_{in}$
- B. Methyl orange (3.1 to 4.4) is a suitable indicator for titration of weak acid and strong base
- C. Bromothymol blue (6.0 to 7.6) is a good indicator for titration of HCl and NaOH
- D. Thymol blue (1.2 "to" 2.8) is a very good indicator for titration of 100 ML of 0.1 M NH_4OH ($pK_b = 4.74$) and 0.1 M HCl

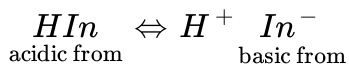
Answer: A,C

 [Watch Video Solution](#)

11. Acid-base indicators are either weak organic acids or weak organic bases. Indicator change colour in dilute solution when the hydronium ion concentration reaches a particular value. For example, Phenolphthalein is a colourless substance in any aqueous solution with a pH less than 8.3. In between the pH range 8.3 to 10, transition of colour (colourless to pink)

takes place and if pH of solution is greater than 10 solution is dark pink.

Considering an acid indicator HIn , the equilibrium involving it and its conjugate base In^- can be represented as :



pH of solution can be computed as :

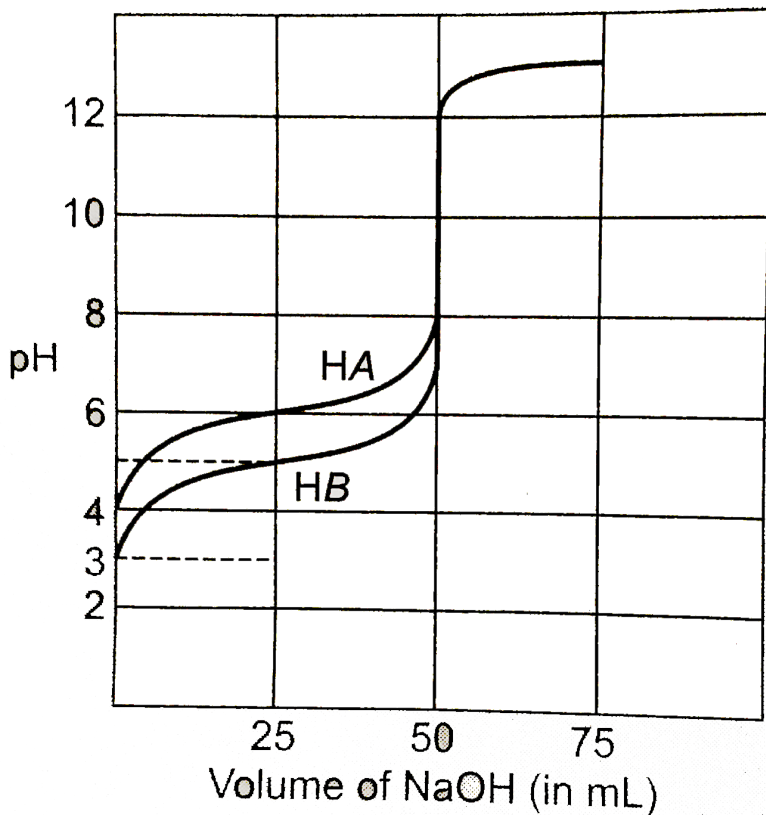
$$pH = pK_{In} + \log \frac{[In^-]}{[HIn]}$$

In general, transition of colour takes place in between the pH range

$pK_{In \pm 1}$.

Following is the titration curve of two acid HA and HB (5 milli-moles each)

titrated against strong base NaOH(0.1M)



What is pK_a for HB acid ?

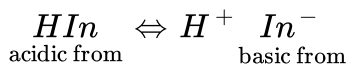
- A. 3
- B. 4
- C. 5
- D. 6

Answer: C





12. Acid-base indicators are either weak organic acids or weak organic bases. Indicator change colour in dilute solution when the hydronium ion concentration reaches a particular calur For example. Phenolphthalein is a coloureless stbstance in any aqueous solution with a pH less than 8.3 In between the pH range 8.3 to 10, transition of colour (colourless to pink) takes place and if pH of solution is greater than 10 solution is dark pink. Considering an acid indicator HIn , the equilibrium involving it and its conjgate base In^- can be represented as :

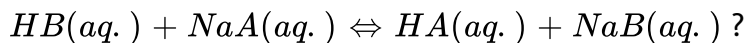


pH of solution can be computed as :

$$pH = pK_{In} + \log \frac{[In^-]}{[HIn]}$$

In general, transition of colour takes place in between the pH range $pK_{In} \pm 1$.

What is equilibrium constant for the reaction :



B. 0.1

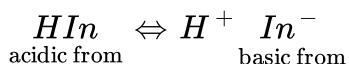
C. 10^{-7}

D. None of these

Answer: A

 [Watch Video Solution](#)

13. Acid-base indicators are either weak organic acids or weak organic bases. Indicators change colour in dilute solution when the hydronium ion concentration reaches a particular value. For example, phenolphthalein is a colourless substance in any aqueous solution with a pH less than 8.3. In between the pH range 8.3 to 10, transition of colour (colourless to pink) takes place and if pH of solution is greater than 10, solution is dark pink. Considering an acid indicator HIn , the equilibrium involving it and its conjugate base In^- can be represented as :



pH of solution can be computed as :

$$pH = pK_{In} + \log \frac{[IN^-]}{[HIn]}$$

In general, transition of colour takes place in between the pH range $pK_{In \pm 1}$.

Calculate the pH at equivalence point when 5 milli mol of HB is titrated with 0.1 M NaOH.

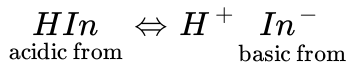
- A. 8.75
- B. 8.85
- C. 9.0
- D. None of these

Answer: B

 [Watch Video Solution](#)

14. Acid-base indicators are either weak organic acids or weak organic bases. Indicator change colour in dilute solution when the hydronium ion concentration reaches a particular colour For example. Phenolphthalein is a colourless substance in any aqueous solution with a pH less than 8.3 In

between the pH range 8.3 to 10, transition of colour (colourless to pink) takes place and if pH of solution is greater than 10 solution is dark pink. Considering an acid indicator HIn , the equilibrium involving it and its conjugate base In^- can be represented as :



pH of solution can be computed as :

$$pH = pK_{In} + \log \frac{[In^-]}{[HIn]}$$

In general, transition of colour takes place in between the pH range $pK_{In \pm 1}$

Which of the following indicator is most suitable for titration of HB with strong base :

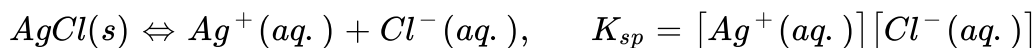
- A. Phenolphthalein (8.3-10)
- B. Bromothymol blue (6-7.6)
- C. Methyl red (4.2-6.3)
- D. Malachite green (11.4-13)

Answer: A



Watch Video Solution

15. Consider a saturated solution of silver chloride that is in contact with solid silver chloride. The solubility equilibrium can be represented as



Where K_{sp} is called the solubility product constant or simply the solubility product. In general, the solubility product of a compound is the product of the molar concentrations of the constituent ions, each raised to the power of its stoichiometric coefficient in the equilibrium equation.

For concentrations of ions that do not necessarily correspond to equilibrium conditions we use the reaction quotient (Q) which is called the ion or ionic product (Q) to predict whether a precipitate will form. Note that (Q) has the same form as K_{sp} are

$Q < K_{sp}$ Unsaturated solution

$Q = K_{sp}$ Saturated solution

$Q > K_{sp}$ Supersaturated solution, precipitate will form

Will a precipitate form if 50 cm^3 of $0.01 \text{ M } AgNO_3$ and 50 cm^3 of $2 \times 10^{-5} \text{ M NaCl}$ are mixed?

[Given: $K_{sp}(AgCl) = 10^{-10} \text{ M}^2$]

A. Yes

B. No

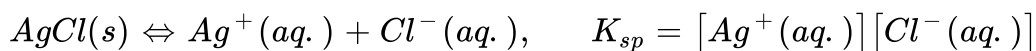
C. Ionic product is less than solubility product, hence precipitate will
from

D. Data insufficient

Answer: A

 [Watch Video Solution](#)

16. Consider a saturated solution of silver chloride that is in contact with solid silver chloride. The solubility equilibrium can be represented as



Where K_{sp} is called the solubility product constant or simply the solubility product. In general, the solubility product of a compound is the product of the molar concentrations of the constituent ions, each raised to the power of its stoichiometric coefficient in the equilibrium equation.

For concentrations of ions that do not necessarily correspond to

equilibrium conditions we use the reaction quotient (Q) which is called the ion or ionic product (Q) to predict whether a precipitate will form. Note that (Q) has the same form as K_{sp} are

$Q < K_{sp}$ Unsaturated solution

$Q = K_{sp}$ Saturated solution

$Q > K_{sp}$ Supersaturated solution, precipitate will form

Will a precipitate form if 1 volume of 0.1 M Pb^{2+} ion solution is mixed with 3 volume of 0.3 M Cl^- ion solution ?

[Given: $K_{sp}(PbCl_2) = 1.7 \times 10^{-5} M^3$]

A. Yes

B. No

C. Ionic product is less than solubility product, hence precipitate will form

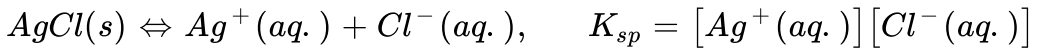
D. Data insufficient

Answer: A



Watch Video Solution

17. Consider a saturated solution of silver chloride that is in contact with solid silver chloride. The solubility equilibrium can be represented as



Where K_{sp} is called the solubility product constant or simply the solubility product. In general, the solubility product of a compound is the product of the molar concentrations of the constituent ions, each raised to the power of its stoichiometric coefficient in the equilibrium equation.

For concentrations of ions that do not necessarily correspond to equilibrium conditions we use the reaction quotient (Q) which is called the ion or ionic product (Q) to predict whether a precipitate will form. Note that (Q) has the same form as K_{sp} are

$Q < K_{sp}$ Unsaturated solution

$Q = K_{sp}$ Saturated solution

$Q > K_{sp}$ Supersaturated solution, precipitate will form

At $25^\circ C$, will a precipitate of $Mg(OH)_2$ form when a 0.0001 M solution of $Mg(NO_3)_2$ is adjusted to a pH of 9.0? At what minimum value of pH will precipitation start?

$$[\text{Given: } K_{sp}(Mg(OH)_2) = 10^{-11} M^3]$$

A. No, pH=3.5

B. No pH 10.5

C. No, pH=6.0

D. Yes, pH=8.5

Answer: B



Watch Video Solution

18. Determine the molar solubility of MgF_2 from its solubility product

$$K_{sp} = 4 \times 10^{-9} :$$

A. 10^{-3}

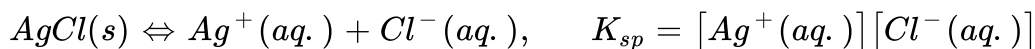
B. 6.32×10^{-5}

C. 2×10^{-5}

D. None of these

Answer: A

19. Consider a saturated solution of silver chloride that is in contact with solid silver chloride. The solubility equilibrium can be represented as



Where K_{sp} is called the solubility product constant or simply the solubility product. In general, the solubility product of a compound is the product of the molar concentrations of the constituent ions, each raised to the power of its stoichiometric coefficient in the equilibrium equation.

For concentrations of ions that do not necessarily correspond to equilibrium conditions we use the reaction quotient (Q) which is called the ion or ionic product (Q) to predict whether a precipitate will form. Note that (Q) has the same form as K_{sp} are

$Q < K_{sp}$ Unsaturated solution

$Q = K_{sp}$ Saturated solution

$Q > K_{sp}$ Supersaturated solution, precipitate will form

The molar solubility of ferric hydroxide in aqueous solution is 6×10^{-38} at 298 K. the solubility of Fe^{3+} ion will increase when the :

A. pH is increased

B. pH is 7.0

C. pH is decreased

D. saturated solution is exposed to the atmosphere

Answer: A

 [Watch Video Solution](#)

One Or More Answer Is Are Correct

1. Which is/are wrong statement (s) ?

A. Arrhenius acids are also Bronsted acids but all Arrhenius bases are not Bronsted base

B. All Lewis bases are Bronsted bases

C. All Bronsted acids are Lewis acids

D. Conjugate base of a strong acid is weak

Answer: B,C

 [Watch Video Solution](#)

Assertion Reason Type Questions

1. STATEMENT-1: All strong monoprotic acid with same concentration in dilute solution show same pH.

STATEMENT-2: Water shows levelling effect.

A. If both the statements are TRUE and STATEMENT-2 is the correct explanation of STATEMENT-1

B. If both the statements are TRUE AND STATEMENT-2 is NOT the correct explanation of STATEMENT-1

C. If STATEMENT-1 is TRUE and STATEMENT-2 is FALSE

D. If STATEMENT-1 is FALSE and STATEMENT-2 is TRUE

Answer: A

 [Watch Video Solution](#)

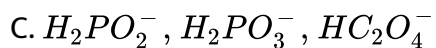
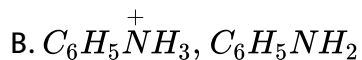
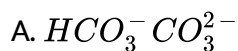
Subjective Problems

1. Calculate pOH of 0.1 M aq. Solution of weak base BOH ($K_b = 10^{-7}$) at $25^\circ C$.

 [Watch Video Solution](#)

Others

1. Which of the following are conjugate acid-base pairs ?



D. OH^- , H^+

Answer: A,B

 Watch Video Solution

2. Which are the set of amphoteric species ?

A. H_2O , $H_2PO_4^-$, HPO_4^-

B. HPO_4^{2-} , HCO_3^-

C. $H_2PO_2^-$, $H_2PO_3^-$, $HC_2O_4^-$

D. HPO_3^{2-} , H_2O , CO_3^{2-}

Answer: A,b,C

 Watch Video Solution

3. Which of the following statements is/are not correct ?

- A. A substance which can provide OH^- in aqueous medium is a base
- B. A substance which can accept a pair of electrons is a base
- C. A substance which can accept a proton in aqueous medium is a base
- D. A substance which can donate a pair of electrons is a base

Answer: B

 [Watch Video Solution](#)

4. If degree of ionization (α) of a weak electrolyte AB is very less then α is :

- A. Directly proportional to the square root of volume of solution
- B. inversely proportional to the dilution
- C. inversely proportional to the square root of concentration
- D. directly proportional to concentration

Answer: A,C

 [Watch Video Solution](#)

5. Factor influencing the degree of ionization of a weak electrolyte is :

- A. dilution
- B. temperature
- C. presence of other ions
- D. nature of solvent

Answer: A,B,C,D

 [Watch Video Solution](#)

6. Which of the following statement (s) is/are correct about the ionic product of water ?

A. K_i (ionization constant of water) $< K_w$ (ionic product of water)

B. $pK_i > pK_w$

C. At 300K, K_w of water becomes 10^{-12}

D. Ionic product of water at 25°C is 10^{-14}

Answer: A,B,C,D

 [Watch Video Solution](#)

7. Which among the following statement is/are correct ?

A. $pH = -\log_{10}[H_3O^+]$ for dilute solution

B. pH of H_2O decreases with increase of temperature

C. pH can not more than 14

D. If a solution is diluted ten times, its pH always increases by 1

Answer: B,D

 [Watch Video Solution](#)

8. If concentration of two weak acids are different and D.O.D (α) are very less then their relative strength can be compared by :

A. $\frac{[H^+]_1}{[H^+]_2}$

B. $\frac{\alpha_1}{\alpha_2}$

C. $\frac{C_1\alpha_1}{C_2\alpha_2}$

D. $\frac{K_{a1}C_1}{K_{a2}C_2}$

Answer: A,C



Watch Video Solution

9. If concentration of two weak bases are same and D.O.D (α) are very less their relative strength can be compared by :

A. $\frac{[OH^-]_1}{[OH^-]_2}$

B. $\frac{Kb_1}{Kb_2}$

C. $\frac{\alpha 1}{\alpha 2}$

D. $\frac{\sqrt{Kb_1}}{\sqrt{Kb_2}}$

Answer: D

 [Watch Video Solution](#)

10. Which of the following expression is/are true ?

A. $[H^+] = [OH^-] = \sqrt{K_w}$ for a neutral solution

B. $[OH^-] < \sqrt{K_w}$

C. $pH+pOH=14$ at all temperature

D. $[H^+] = 10^{-7}$ M for a neutral solution at $25^\circ C$

Answer: A,D

 [Watch Video Solution](#)

11. If K_{a1} , K_{a2} and K_{a3} be the first, second and third dissociation constant of H_3PO_4 and $K_{a1} > K_{a2} > K_{a3}$ which is/are correct :

A. $[H^+] \approx \sqrt{K_{a1}[H_3PO_4]}$

B. $[H^+] \approx [HPO_4^{2-}]$

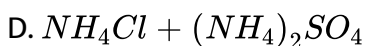
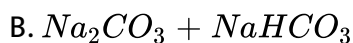
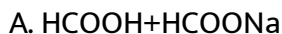
C. $K_{a2} \approx [HPO_4^{2-}]$

D. $[HPO_4^{2-}] = [PO_4^{3-}]$

Answer: A,C

 [Watch Video Solution](#)

12. Which of the following mixture constitute a buffer?



Answer: A,B

 [Watch Video Solution](#)

13. Which of the following mixture can act as a buffer?

- A. $\text{NaOH} + \text{HCOONa}$ (1:1 molar ratio)
- B. $\text{HCOOH} + \text{NaOH}$ (2:1 molar ratio)
- C. $\text{NH}_4\text{Cl} + \text{NaOH}$ (2:1 molar ratio)
- D. $\text{HCOOH} + \text{NaOH}$ (1:1 molar ratio)

Answer: B

 [Watch Video Solution](#)

14. Which of the following will function as buffer ?

- A. $\text{NaCl} + \text{NaOH}$

B. Borax + boric acid

C. $NaH_2PO_4 + Na_2HPO_4$

D. $NH_4Cl + NH_4OH$

Answer: C

 [Watch Video Solution](#)

15. Which of the following statements is/are correct?

A. The conjugate acid of NH_2^- is NH_3

B. Solubility product constant increases with increase in concentration of ions

C. On diluting a buffer solution pH change is negligible

D. In alkaline buffer solution, if some HCl is added, its $[OH^-]$ will increase

Answer: A,B,C



[Watch Video Solution](#)

16. Degree of hydrolysis (α) for a salt of strong acid and weak base is :

- A. independent of dilution
- B. increases with dilution
- C. increases with decreases in K_b
- D. increases with increase n temperature

Answer: B,C



[Watch Video Solution](#)

17. The compound whose 0.1 M solution is acidic :

- A. Ammonium formate
- B. Ammonium sulphate
- C. Ammonium chloride

D. Sodium formate

Answer: B,C



Watch Video Solution

18. Formic acid is a weak acid and hydrochloric acid is a strong acid. It shows that the :

A. $[OH^-]$ of 0.01 M HCl (aq.) will be less than that of 0.01 M HCOOH (aq.)

B. a solution containing 0.1 M NaOH (aq.) and 0.1 M HCOONa (aq.) is a buffer solution

C. pH of 10^{-9} M HCl (aq.) will be approximately 7 at $25^\circ C$

D. pH of a solution formed by mixing equimolar quantities of HCOOH and HCl will be less than that of a similar solution formed HCOOH and HCOONa

Answer: A,C,D



Watch Video Solution

19. If you have a saturated solution of CaF_2 then :

A. $[Ca^{2+}] = (K_{sp}/4)^{1/3}$

B. $2 \times [Ca^{2+}] = [F^-]$

C. $[Ca^{2+}] = 2[F^-]$

D. $[Ca^{2+}] = \sqrt{K_{sp}}$

Answer: A



Watch Video Solution

20. H_2A is a weak diprotic acid. If the pH of 0.1 M H_2A solution is 3 and concentration of A^{2-} is 10^{-12} at $25^\circ C$.

Select correct statement (s)

A. $[H^+]_{\text{total}} \approx [H^+]$ from first step of ionization of acid H_2A

B. Concentration of OH^- in solution is 10^{-3} M

C. The value of K_{a1} is nearly 10^{-5}

D. $pK_{a2} - pK_{a1} = 9$

Answer: A,C

 [Watch Video Solution](#)

21. Which is/are correct statement (s)?

A. CH_3COONH_4 have greater degree of hydrolysis in 0.2 M solution in comparison os 0.4 M solution.

B. Ahnions which are weaker base than OH^- , do not hydrolyse

C. The CH_3COO^- , have greater of hydrolysis in comparison of $HCOO^-$ when their salt solution have equal conc.

D. SO_4^{2-} hydrolyses but HSO_4^- does not undergo hydrolysis

Answer: C



Watch Video Solution

22. 0.01 M NH_4Cl (aq) solution at $25^\circ C$ has:

A. $[Cl]^- (aq) < 10^{-2} M$

B. $[NH_4]^+ (aq) < 10^{-2} M$

C. $pOH < 7$

D. $[H^+] > 10^{-7} M$

Answer: B



Watch Video Solution

23. In an acidic indicator HIn has an ionization constant is 10^{-8} . The acid form of indicator is yellow and alkaline form is red. Which is correct

statement?

(Given : $\log 2 = 0.3$, $\log 3 = 0.48$)

- A. The pH range of indicator is 7 to 9
- B. Change in pH is 0.96 when 75% yellow colour change to 75% red colour
- C. This indicator is suitable for the titration of strong acid vs. strong base
- D. pH of indicator is 8.3 when ration of acid from to alkaline from is 2.

Answer: A,B,C

 **Watch Video Solution**

24. Match the following columns

Column-I

- (A) Conjugate acid-base pair
- (B) Acid-base adduct
- (C) An acid-base reaction
- (D) Proton donation

Column-II

- (P) Bronsted-Lowry concept
- (Q) Lewis concept
- (R) Arrhenius concept
- (S) $K_a \cdot K_b = K_w$



Watch Video Solution

25. Match the following columns

Column-I

- (A) $\text{Fe}(\text{NO}_3)_2(\text{aq.})$
- (B) $\text{KClO}_4(\text{aq.})$
- (C) $\text{HCOONa}(\text{aq.})$
- (D) $\text{NH}_4\text{CN}(\text{aq.})$

Column-II

- (P) Only cationic hydrolysis
- (Q) Only anionic hydrolysis
- (R) Both cationic as well as anionic hydrolysis
- (S) No hydrolysis



Watch Video Solution

26. Match the following columns

Column-I

- (A) Salt of weak acid and weak base
- (B) Salt of weak acid and strong base
- (C) Salt of strong acid and strong base
- (D) Salt of strong acid and weak base

Column-II

- (P) $\text{pH} = 1/2 [\text{p}K_w + \text{p}K_a + \log C]$
- (Q) $\text{pH} = 1/2 [\text{p}K_w + \text{p}K_a - \text{p}K_b]$
- (R) $\text{pH} = 1/2 [\text{p}K_w - \text{p}K_b - \log C]$
- (S) $\text{pH} = 1/2 [\text{p}K_w]$



Watch Video Solution

27. Match the following columns

Column-I

- (A) Salt of weak acid and weak base ($pK_a = pK_b$)
- (B) Salt of weak acid and strong base
- (C) Salt of strong acid and strong base
- (D) Salt of strong acid and weak base

Column-II

- (P) pH of solution at 25°C less than 7
- (Q) pH of solution at 25°C greater than 7
- (R) pH of solution at 25°C equal to 7
- (S) pH cannot be find until the value K_a/K_b is given



Watch Video Solution

28. Match the following columns

Column-I

- (A) pH of 0.1 M HA ($pK_a = 5$) and 0.01 M NaA (P) 4
- (B) pH of 0.1 M BOH ($pK_b = 6$) and 0.1 M BCl (Q) 7
- (C) pH of 0.1 M salt of weak acid ($pK_a = 5$) and weak base ($pK_b = 7$) (R) 6
- (D) pH of 500 litre of 0.02 M HNO_3 and 500 litre 0.01 M $Sr(OH)_2$ (S) 8

Column-II



Watch Video Solution

29. Match the following columns

Column-I

- (A) CH_3COOH ($\text{p}K_a = 4.74, 0.1 M$)
+ CH_3COONa ($0.1 M$)
- (B) CH_3COOH ($0.1 M$) + HCl ($0.1 M$)
- (C) CH_3COOH ($\text{p}K_a = 4.74, 0.1 M$) + NH_4OH
($\text{p}K_b = 4.74, 0.1 M$)
- (D) CH_3COONa (300 mL of $0.1 M$) + HCl
(100 mL of $0.1 M$)

Column-II

- (P) Acidic buffer at its maximum capacity
- (Q) Buffer solution
- (R) $\text{pH} < 7$ at 25°C
- (S) $\text{pH} = 7$ at 25°C



Watch Video Solution

30. Match the following columns

Column-I

- (A) Titration of a strong acid with strong base
- (B) Titration of weak acid with strong base
- (C) Titration of strong acid with weak base
- (D) Titration of weak acid with weak base

Column-II

- (P) Methyl orange ($3.1 - 4.4$)
- (Q) Methyl red ($4.2 - 6.3$)
- (R) Phenolphthalein ($8.3 - 10$)
- (S) No general indicator is suitable



Watch Video Solution

31. Match the following columns

Column-I	Column-II
(A) Mercurous iodide	(P) $108 S^5$
(B) Aluminium phosphate	(Q) $4 S^3$
(C) Calcium phosphate	(R) S^2
(D) Zirconium phosphate	(S) $6912 S^7$

 [Watch Video Solution](#)

32. statement-1: If water is heated of $50^\circ C$ then pH will increase.

STATEMENT-2: K_w increases with increase in temperature.

- A. If both the statements are TRUE and STATEMENT-2 is the correct explanation of STATEMENT-1
- B. If both the statements are TRUE AND STATEMENT-2 is NOT the correct explanation of STATEMENT-1
- C. If STATEMENT-1 is TRUE and STATEMENT-2 is FALSE
- D. If STATEMENT-1 is FALSE and STATEMENT-2 is TRUE

Answer: D



[Watch Video Solution](#)

33. STATEMENT-1: Addition of HCl (aq.) to HCOOH(aq.) decrease the dissociation of HCOOH(aq.)

STATEMENT-2: Due to common ion effect of H^+ , dissociation of HCOOH decrease.

- A. If both the statements are TRUE and STATEMENT-2 is the correct explanation of STATEMENT-1
- B. If both the statements are TRUE AND STATEMENT-2 is NOT the correct explanation of STATEMENT-1
- C. If STATEMENT-1 is TRUE and STATEMENT-2 is FALSE
- D. If STATEMENT-1 is FALSE and STATEMENT-2 is TRUE

Answer: A



[Watch Video Solution](#)

34. STATEMENT-1: pH of 10^{-7} M HCl is less than 7 at 25°C .

STATEMENT-2: At very low concentration of HCl, contribution of H^{+} from water is considerable.

- A. If both the statements are TRUE and STATEMENT-2 is the correct explanation of STATEMENT-1
- B. If both the statements are TRUE AND STATEMENT-2 is NOT the correct explanation of STATEMENT-1
- C. If STATEMENT-1 is TRUE and STATEMENT-2 is FALSE
- D. If STATEMENT-1 is FALSE and STATEMENT-2 is TRUE

Answer: A



[Watch Video Solution](#)

35. STATEMENT-1: The dissociation constants of weak diprotic acid are in the order of $K_{a1} > K_{a2}$

STATEMENT-2: Removal of H^+ from anion is difficult as compared to neutral molecule.

- A. If both the statements are TRUE and STATEMENT-2 is the correct explanation of STATEMENT-1
- B. If both the statements are TRUE AND STATEMENT-2 is NOT the correct explanation of STATEMENT-1
- C. If STATEMENT-1 is TRUE and STATEMENT-2 is FALSE
- D. If STATEMENT-1 is FALSE and STATEMENT-2 is TRUE

Answer: A



Watch Video Solution

36. STATEMENT-1: When 0.1 M weak diprotic acid H_2A dissociated with its dissociation constants $K_{a_1} = 10^{-3}$ and $K_{a_2} = 10^{-8}$, then $[A^{2-}]$ is almost equal to 10^{-3} M

STATEMENT-2: Since $K_{a_2} \ll K_{a_1}$ for 0.1 M H_2A , so $[A^{2-}]$ is negligible w.r.t. $[HA^-]$

- A. If both the statements are TRUE and STATEMENT-2 is the correct explanation of STATEMENT-1
- B. If both the statements are TRUE AND STATEMENT-2 is NOT the correct explanation of STATEMENT-1
- C. If STATEMENT-1 is TRUE and STATEMENT-2 is FALSE
- D. If STATEMENT-1 is FALSE and STATEMENT-2 is TRUE

Answer: D

 [Watch Video Solution](#)

37. Statement-1: pH value of acidic buffer solution changes , If buffer solution is diluted upto very large extent.

Statement-2: $[H^+]$ decreases due to change in concentration as well as α increases and decreases in concentration is more as compared to increases in α .

- A. If both the statements are TRUE and STATEMENT-2 is the correct explanation of STATEMENT-1
- B. If both the statements are TRUE AND STATEMENT-2 is NOT the correct explanation of STATEMENT-1
- C. If STATEMENT-1 is TRUE and STATEMENT-2 is FALSE
- D. If STATEMENT-1 is FALSE and STATEMENT-2 is TRUE

Answer: A



Watch Video Solution

38. Assertion : In a titration of weak monoprotic acid with strong base, the pH at the half equivalence point is pK_a .

Reason : At half equivalence point, it will form acidic buffer at its maximum capacity where $[acid] = [salt]$.

- A. If both the statements are TRUE and STATEMENT-2 is the correct explanation of STATEMENT-1
- B. If both the statements are TRUE AND STATEMENT-2 is NOT the correct explanation of STATEMENT-1
- C. If STATEMENT-1 is TRUE and STATEMENT-2 is FALSE
- D. If STATEMENT-1 is FALSE and STATEMENT-2 is TRUE

Answer: A



Watch Video Solution

39. Assertion: In the titration of Na_2CO_3 with HCl using methyl orange indicator, the volume of acid required is twice that of the acid required using phenolphthalein as indicator.

Reason: Two moles of HCl are required for the complete neutralisation of one mole of Na_2CO_3 .

- A. If both the statements are TRUE and STATEMENT-2 is the correct explanation of STATEMENT-1
- B. If both the statements are TRUE AND STATEMENT-2 is NOT the correct explanation of STATEMENT-1
- C. If STATEMENT-1 is TRUE and STATEMENT-2 is FALSE
- D. If STATEMENT-1 is FALSE and STATEMENT-2 is TRUE

Answer: A



Watch Video Solution

40. STATEMENT-1: In the acid-base titration involving strong base and weak acid, methyl red can be used as an indicator.

STATEMENT-2: Methyl red changes its colour in the pH range 4.2 to 6.3.

- A. If both the statements are TRUE and STATEMENT-2 is the correct explanation of STATEMENT-1
- B. If both the statements are TRUE AND STATEMENT-2 is NOT the correct explanation of STATEMENT-1
- C. If STATEMENT-1 is TRUE and STATEMENT-2 is FALSE
- D. If STATEMENT-1 is FALSE and STATEMENT-2 is TRUE

Answer: D



[Watch Video Solution](#)

41. STATEMENT-1: Sparingly soluble salts AB and XY_2 with the same solubility product, will have different solubility.

STATEMENT-2: Solubility of sparingly soluble salt depend upon solubility product.

- A. If both the statements are TRUE and STATEMENT-2 is the correct explanation of STATEMENT-1
- B. If both the statements are TRUE AND STATEMENT-2 is NOT the correct explanation of STATEMENT-1
- C. If STATEMENT-1 is TRUE and STATEMETN-2 is FLASE
- D. If STATEMENT-1 is FLASE and STATEMENT-2 is TRUE

Answer: C



[Watch Video Solution](#)

42. STATEMENT-1: Solubility product of BaF_2 will increase on dilution.

STATEMENT-2: Solubility of BaF_2 will change on changing temperature.

- A. If both the statements are TRUE and STATEMENT-2 is the correct explanation of STATEMENT-1
- B. If both the statements are TRUE AND STATEMENT-2 is NOT the correct explanation of STATEMENT-1
- C. If STATEMENT-1 is TRUE and STATEMENT-2 is FALSE
- D. If STATEMENT-1 is FALSE and STATEMENT-2 is TRUE

Answer: D



Watch Video Solution

43. STATEMENT-1: Solubility of sparingly soluble salt decreases due to common ion effect.

STATEMENT-2: Solubility product constant does not depend on common ion effect.

- A. If both the statements are TRUE and STATEMENT-2 is the correct explanation of STATEMENT-1

B. If both the statements are TRUE AND STATEMENT-2 is NOT the correct explanation of STATEMENT-1

C. If STATEMENT-1 is TRUE and STATEMENT-2 is FALSE

D. If STATEMENT-1 is FALSE and STATEMENT-2 is TRUE

Answer: B

 [Watch Video Solution](#)

44. Assertion : Solubility of $AgCl$ in $NH_3(aq)$ is greater than in pure water.

Reason : When $AgCl$ dissolve in $NH_3(aq)$, complex ion $[Ag(NH_3)_2]^+$ formation takes place and solubility equilibrium of $AgCl$ shifted in forward direction.

A. If both the statements are TRUE and STATEMENT-2 is the correct explanation of STATEMENT-1

B. If both the statements are TRUE AND STATEMENT-2 is NOT the correct explanation of STATEMENT-1

C. If STATEMENT-1 is TRUE and STATEMENT-2 is FALSE

D. If STATEMENT-1 is FALSE and STATEMENT-2 is TRUE

Answer: A

 [Watch Video Solution](#)

45. Assertion (A): Solubility of $AgCN$ in acidic solutions is greater than in pure water.

Reason (R) : Solubility equilibrium of $AgCN$ is shifted in forward direction due to the formation of HCN .

A. If both the statements are TRUE and STATEMENT-2 is the correct explanation of STATEMENT-1

B. If both the statements are TRUE AND STATEMENT-2 is NOT the correct explanation of STATEMENT-1

C. If STATEMENT-1 is TRUE and STATEMENT-2 is FALSE

D. If STATEMENT-1 is FALSE and STATEMENT-2 is TRUE

Answer: A

 [Watch Video Solution](#)

46. pH of 0.01 M aq. solution of HA is 4. Find the value of pK_a of HA at $25^\circ C$.

 [Watch Video Solution](#)

47. Calculate approximate pH of 10^{-10} M NaOH at $25^\circ C$.

 [Watch Video Solution](#)

48. Calculate pH of a resultant solution of 25 mL of 0.1 M HCl, 50 mL of 0.02 M HNO_3 and 25 mL of 0.1M NaOH



[Watch Video Solution](#)

49. Calculate pH of a resultant solution of 0.1 M HA ($K_a = 10^{-6}$) and 0.5 M HB ($K_a = 2 \times 10^{-6}$) at $25^\circ C$.



[Watch Video Solution](#)

50. 0.16g of N_2H_4 are dissolved in water and the total volume made upto 500 mL. Calculate the percentage of N_2H_4 that has reacted with water in this solution. (K_b for $N_2H_4 = 4.0 \times 10^{-6}$)



[Watch Video Solution](#)

51. Calculate pH of a buffer solution that contains 0.1M NH_4OH ($K_b = 10^{-5}$) and 0.1 M NH_4Cl .



[Watch Video Solution](#)

52. Calculate the ratio of sodium formate and formic acid ($K_a = 2 \times 10^{-4}$) in a buffer solution of pH=4.3.

 [Watch Video Solution](#)

53. What is the pOH of 0.1 M KB (salt of weak acid and strong base) at $25^\circ C$? (Given : $pK_b \text{ of } B^- = 7$)

 [Watch Video Solution](#)

54. A certain weak acid has $K_a = 10^{-5}$. If the equilibrium constant for a reaction with a strong base is represented as 1×10^y then find the value of y.

 [Watch Video Solution](#)

55. If solubility of AgCl in 0.2 M solution of $AgNO_3$ is represented as $y \times 10^{-10}$ then find the value of y.

(Given: $K_{sp}(AgCl) = 10^{-10}$)

 [Watch Video Solution](#)

56. When one litre of a saturated solution of $PbCl_2$ (mol. Mass=278) is evaporated, the residue is found to weight 2.78g. If K_{sp} of $PbCl_2$ is represented as $y \times 10^{-6}$ then find the value of y.

 [Watch Video Solution](#)

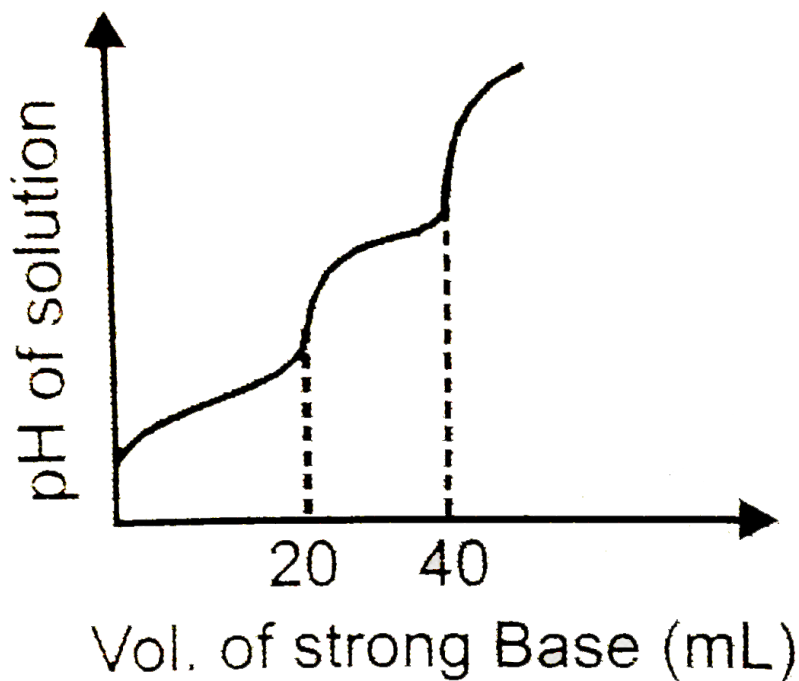
57. A solution is saturated in $SrCO_3$ and SrF_2 The CO_3^{2-} was found to be 10^{-3} mol/L. If the concentration of F^- in solution is represented as $y \times 10^{-2}$ M then what is the value of y ?

[Given: $K_{sp}(SrCO_3) = 2.5 \times 10^{-10}$, $K_{sp}(SrF_2) = 10^{-10}$]

 [Watch Video Solution](#)

58. 10 mL of H_2A (weak diprotic acid) solution is titrated against 0.1M NaOH. pH of the solution is plotted against volume of strong base added and following observation is made. If pH of the solution at first equivalence point is pH_1 and at second equivalence point is pH_2 . Calculate the value of $(pH_2 - pH_1)$ at $25^\circ C$

Given for H_2A , $pK_{a1} = 4.6$ and $pK_{a2} = 8$, $\log 25 = 1.4$



Watch Video Solution

59. Amongst the following, the total number of compounds whose aqueous solution turns red litmus paper blue is:



[Watch Video Solution](#)