



MATHS

BOOKS - CENGAGE MATHS (ENGLISH)

THEORY OF EQUATIONS

Single correct Answer

1. Number of real solutions of $\sqrt{2x - 4} - \sqrt{x + 5} = 1$ is (a) 0 (b) 1 (c) 2
(d) infinite

A. 0

B. 1

C. 2

D. infinite

Answer: B



Watch Video Solution

2. Number of real solutions of $\sqrt{x} + \sqrt{x - \sqrt{1-x}} = 1$ is (a) 0 (b) 1 (c) 2
(d) infinite

A. 0

B. 1

C. 2

D. infinite

Answer: B



Watch Video Solution

3. The set of real values of a for which the equation $\frac{2a^2 + x^2}{a^3 - x^3} - \frac{2x}{ax + a^2 + x^2} + \frac{1}{x - a} = 0$ has a unique solution is (a) $(-\infty, 1)$ (b) $(-1, \infty)$ (c) $(-1, 1)$ (d) $\mathbb{R} - \{0\}$

A. $(-\infty, 1)$

B. $(-1, \infty)$

C. $(-1, 1)$

D. $R - \{0\}$

Answer: D



Watch Video Solution

4. Number of distinct real solutions of the equation

$$x^2 + \left(\frac{x}{x-1}\right)^2 = 8 \text{ is (a) 1 (b) 2 (c) 3 (d) 4}$$

A. 1

B. 2

C. 3

D. 4

Answer: C



Watch Video Solution

5. If m, n are positive integers and $m + n\sqrt{2} = \sqrt{41 + 24\sqrt{2}}$, then $(m + n)$ is equal to (a) 5 (b) 6 (c) 7 (d) 8

A. 5

B. 6

C. 7

D. 8

Answer: C



Watch Video Solution

6. The equation $(x + 3 - 4(x - 1)^{1/2})^{1/2} + (x + 8 - 6(x - 1)^{1/2})^{1/2} = 1$ has (A) no solution (B) only 1 solution (C) only 2 solutions (D) more than 2 solutions

A. no solution

B. only 1 solution

C. only 2 solutions

D. more than 2 solutions

Answer: D



Watch Video Solution

7. The number of solutions of $\sqrt{3x^2 + x + 5} = x - 3$ is (A) 0 (B) 1 (C) 2
(D) 4

A. 0

B. 1

C. 2

D. 4

Answer: A



Watch Video Solution

8. The number of real or complex solutions of $x^2 - 6|x| + 8 = 0$ is (a) 6
(b) 7 (c) 8 (d) 9

A. 6

B. 7

C. 8

D. 9

Answer: A



Watch Video Solution

9. If α, β are the roots of the quadratic equation $x^2 - \left(3 + 2\sqrt{\log_2 3} - 3\sqrt{\log_3 2}\right)x - 2\left(3^{\log_3 2} - 2^{\log_2 3}\right) = 0$, then the value of $\alpha^2 + \alpha\beta + \beta^2$ is equal to :

A. 11

B. 7

C. 3

D. 5

Answer: B



[Watch Video Solution](#)

10. Which of the following is not true for equation $x^2 \log 8 - x \log 5 = 2(\log 2) - x$ (A) equation has one integral root (B) equation has no irrational roots (C) equation has rational roots (D) none of these

A. equation has one integral root

B. equation has no irrational roots

C. equation has rational roots

D. none of these

Answer: D



Watch Video Solution

11. Let $f(x)$ be a quadratic expression such that $f(-1) + f(2) = 0$. If one root of $f(x) = 0$ is 3, then the other root of $f(x) = 0$ lies in (A) $(-\infty, -3)$ (B) $(-3, \infty)$ (C) $(0, 5)$ (D) $(5, \infty)$

A. $(-\infty, -3)$

B. $(-3, \infty)$

C. $(0, 5)$

D. $(5, \infty)$

Answer: B



Watch Video Solution

12. If $f(x) = (x^2 + 3x + 2)(x^2 - 7x + a)$ and $g(x) = (x^2 - x - 12)(x^2 + 5x + b)$, then the value of a and b , if $(x + 1)(x - 4)$ is H.C.F. of $f(x)$ and $g(x)$ is (a) $a=10 : b=6$ (b) $a=4 : b=12$ (c) $a=12 : b=4$ (d) $a=6 : b=10$

A. $a = 10 : b = 6$

B. $a = 4 : b = 12$

C. $a = 12 : b = 4$

D. $a = 6 : b = 10$

Answer: C

 [Watch Video Solution](#)

13. The remainder obtained when the polynomial $x + x^3 + x^9 + x^{27} + x^{81} + x^{243}$ is divided by $x^2 - 1$ is (a) $6x+1$ (b) $5x+1$ (c) $4x$ (d) $6x$

A. $6x + 1$

B. $5x + 1$

C. $4x$

D. $6x$

Answer: B



Watch Video Solution

14. Let $f(x) = x^2 - ax + b$, ' a ' is odd positive integer and the roots of the equation $f(x) = 0$ are two distinct prime numbers. If $a + b = 35$, then the value of $f(10) =$

A. -8

B. -10

C. -4

D. 0

Answer: A



Watch Video Solution

15. If $0 < \alpha < \beta < \gamma < \pi/2$, then the equation

$$(x - \sin \beta)(x - \sin \gamma) + (x - \sin \alpha)(x - \sin \gamma) + (x - \sin \alpha)(x - \sin \beta) = 0$$

has

- A. real and unequal roots
- B. non-real roots
- C. real and equal roots
- D. real and unequal roots greater than 2

Answer: A



Watch Video Solution

16. If the system of equation $r^2 + s^2 = t$ and $r + s + t = \frac{k - 3}{2}$ has exactly one real solution, then the value of k is

- A. 1
- B. 2
- C. 3
- D. 4

Answer: B



[Watch Video Solution](#)

17. If $a, b, c \in \mathbb{R}$ and $3b^2 - 8ac < 0$, then the equation $ax^4 + bx^3 + cx^2 + 5x - 7 = 0$ has

- A. all real roots
- B. all imaginary roots
- C. exactly two real and two imaginary roots

D. none

Answer: C

 [Watch Video Solution](#)

18. For real solution of equation $3\sqrt{x + 3p + 1} - 3\sqrt{x} = 1$, we have

A. $p \geq 1/4$

B. $p \geq -1/4$

C. $p \geq 1/3$

D. $p \geq -1/3$

Answer: B

 [Watch Video Solution](#)

19. For a, b, c non-zero, real distinct, the equation, $(a^2 + b^2)x^2 - 2b(a + c)x + b^2 + c^2 = 0$ has non-zero real roots. One of these roots is also the root of the equation :

A. $(b^2 - c^2)x^2 + 2a(b - c)x - a^2 = 0$

B. $(b^2 + c^2)x^2 - 2a(b + c)x + a^2 = 0$

C. $a^2x^2 + a(c - b)x - bc = 0$

D. $a^2x^2 - a(b - c)x + bc = 0$

Answer: C



[Watch Video Solution](#)

20. The equation $x^2 + bx + c = 0$ has distinct roots. If 2 is subtracted from each root the result are the reciprocal of the original roots, then $b^2 + c^2$ is

A. 2

B. 3

C. 4

D. 5

Answer: D



[Watch Video Solution](#)

21. The equation $(x^2 + 3x + 4)^2 + 3(x^2 + 3x + 4) + 4 = x$ has

A. all its solutions real but not all positive

B. only two of its solutions real

C. two of its solutions positive and negative

D. none of solutions real

Answer: D



[Watch Video Solution](#)

22. If one root of the equation $(x - 1)(7 - x) = m$ is three times the other, then m is equal to

A. -5

B. 0

C. 2

D. 5

Answer: C



[Watch Video Solution](#)

23. If the roots of the equation $ax^2 - 4x + a^2 = 0$ are imaginary and the sum of the roots is equal to their product then a is

A. -2

B. 4

C. 2

D. none of these

Answer: C



[Watch Video Solution](#)

24. If the sum of squares of roots of equation $x^2 - (\sin \alpha - 2)x - (1 + \sin \alpha) = 0$ is the least, then α is equal to

A. $\pi/4$

B. $\pi/3$

C. $\pi/2$

D. $\pi/6$

Answer: C



[Watch Video Solution](#)

25. If α and β are the roots of the equation $ax^2 + bc + c = 0$ then the sum of the roots of the equation $a^2x^2 + (b^2 - 2ac)x + b^2 - 4ac = 0$ is

A. $-(\alpha^2 - \beta^2)$

B. $(\alpha + \beta)^2 - 2\alpha\beta$

C. $\alpha^2\beta + \beta\alpha^2 - 4\alpha\beta$

D. $-(\alpha^2 + \beta^2)$

Answer: D



[Watch Video Solution](#)

26. If the roots of the quadratic equation $ax^2 + bx - b = 0$, where $a, b \in R$ such that $a \cdot b > 0$, are α and β , then the value of

$\log_{|(\beta-1)|} |(\alpha-1)|$ is

A. (a) 1

B. (b) -1

C. (c) 0

D. (d) none of these

Answer: B



[Watch Video Solution](#)

27. If $\cos^4 \alpha + k$ and $\sin^4 \alpha + k$ are the roots of $x^2 + \lambda(2x + 1) = 0$ and $\sin^2 \alpha + 1$ and $\cos^2 \alpha + 1$ are the roots of $x^2 + 8x + 4 = 0$, then the sum of the possible values of λ is

A. 2

B. -1

C. 1

D. 3

Answer: C



[Watch Video Solution](#)

28. Let $f(x) = ax^2 + bx + c$, $g(x) = ax^2 + qx + r$, where $a, b, c, q, r \in R$ and $a < 0$. If α, β are the roots of $f(x) = 0$ and $\alpha + \delta, \beta + \delta$ are the roots of $g(x) = 0$, then

A. $f_{\max} > g_{\max}$

B. $f_{\max} < g_{\max}$

C. $f_{\max} = g_{\max}$

D. cant say anything about relation between f_{\max} and g_{\max}

Answer: C

 [Watch Video Solution](#)

29. If a, b, c are in geometric progression and the roots of the equations $ax^2 + 2bx + c = 0$ are α and β and those of $cx^2 + 2bx + a = 0$ are γ and δ then

A. $\alpha \neq \beta \neq \gamma \neq \delta$

B. $\alpha \neq \beta$ and $\gamma \neq \delta$

C. $a\alpha = a\beta = c\gamma = c\delta$

D. $\alpha = \beta, \gamma \neq \delta$

Answer: C



Watch Video Solution

30. If α, β are the roots of the equation $ax^2 + bx + c = 0$ and $S_n = \alpha^n + \beta^n$, then $aS_{n+1} + bS_n + cS_{n-1} = (n \geq 2)$

A. 0

B. $a + b + c$

C. $(a + b + c)n$

D. $n^2 abc$

Answer: A



Watch Video Solution

31. Let $f(x) = ax^2 + bx + c$, $g(x) = ax^2 + px + q$, where $a, b, c, q, p \in R$ and $b \neq p$. If their discriminants are equal and $f(x) = g(x)$ has a root α , then

- A. α will be A. M. of the roots of $f(x) = 0, g(x) = 0$
- B. α will be G. M. of the roots of $f(x) = 0, g(x) = 0$
- C. α will be A. M. of the roots of $f(x) = 0$ or $g(x) = 0$
- D. α will be G. M. of the roots of $f(x) = 0$ or $g(x) = 0$

Answer: A



Watch Video Solution

32. If α and β be the roots of equation $x^2 + 3x + 1 = 0$ then the value of $\left(\frac{\alpha}{1+\beta}\right)^2 + \left(\frac{\beta}{1+\alpha}\right)^2$ is equal to

A. 18

B. 19

C. 20

D. 21

Answer: A



Watch Video Solution

33. The roots of the equation $a(b - 2c)x^2 + b(c - 2a)x + c(a - 2b) = 0$ are, when $ab + bc + ca = 0$

A. $1, \frac{c(a - 2b)}{a(b - 2c)}$

B. $\frac{c}{a}, \frac{a - 2b}{b - 2c}$

C. $\frac{a - 2b}{a - 2c}, \frac{a - 2b}{b - 2c}$

D. none of these

Answer: A



Watch Video Solution

34. If the equations $2x^2 - 7x + 1 = 0$ and $ax^2 + bx + 2 = 0$ have a common root, then

A. $a = 2, b = -7$

B. $a = \frac{-7}{2}, b = 1$

C. $a = 4, b = -14$

D. $a = -4, b = 1$

Answer: C



Watch Video Solution

35. If α and β , α and γ , α and δ are the roots of the equations $ax^2 + 2bx + c = 0$, $2bx^2 + cx + a = 0$ and $cx^2 + ax + 2b = 0$ respectively where a, b, c are positive real numbers, then $\alpha + \alpha^2$ is equal to

A. -1

B. 1

C. 0

D. abc

Answer: A



Watch Video Solution

36. The product of uncommon real roots of the polynomials

$p(x) = x^4 + 2x^3 - 8x^2 - 6x + 15$ and $q(x) = x^3 + 4x^2 - x - 10$ is :

A. -6

B. -5

C. 5

D. 6

Answer: D

 [Watch Video Solution](#)

37. Number of values of x satisfying the pair of quadratic equations

$x^2 - px + 20 = 0$ and $x^2 - 20x + p = 0$ for some $p \in R$ is

A. 0

B. 1

C. 2

D. 3

Answer: D

 [Watch Video Solution](#)

38. If the equation $4x^2 - x - 1 = 0$ and $3x^2 + (\lambda + \mu)x + \lambda - \mu = 0$

have a root common, then the irrational values of λ and μ are (a)

$\lambda = \frac{-3}{4}$ b. $\lambda = 0$ c. $\mu = \frac{3}{4}$ b. $\mu = 0$

A. $\lambda = 0, \mu = \frac{-3}{4}$

B. $\lambda = \frac{-3}{4}, \mu = \frac{3}{4}$

C. $\lambda = \frac{-3}{4}, \mu = 0$

D. $\lambda = \frac{-3}{4}, \mu = \frac{1}{4}$

Answer: C



Watch Video Solution

39. If the equations $x^2 + 2\lambda x + \lambda^2 + 1 = 0$, $\lambda \in R$ and $ax^2 + bx + c = 0$, where a, b, c are lengths of sides of triangle have a common root, then the possible range of values of λ is

A. $(0, 2)$

B. $(\sqrt{3}, 3)$

C. $(2\sqrt{2}, 3\sqrt{2})$

D. $(0, \infty)$

Answer: A



Watch Video Solution

40. If both the roots of $\lambda(6x^2 + 3)rx + 2x^2 - 1 = 0$ and $6\lambda(2x^2 + 1) + px + 4x^2 - 2 = 0$ are common, then $2r - p$ is equal to

A. -1

B. 0

C. 1

D. 2

Answer: B



Watch Video Solution

41. $x^3 + 5x^2 + px + q = 0$ and $x^3 + 7x^2 + px + r = 0$ have two roots in common. If their third roots are γ_1 and γ_2 , respectively, then

$$|\gamma_1 + \gamma_2| =$$

A. 10

B. 12

C. 13

D. 42

Answer: B



[Watch Video Solution](#)

42. Let $a, b \in N, a \neq b$ and the two quadratic equations $(a - 1)x^2 - (a^2 + 2)x + a^2 + 2a = 0$ and $(b - 1)x^2 - (b^2 + 2)x + (b^2 + 2b) = 0$ have a common root. The value of ab is

A. 4

B. 6

C. 8

D. 10

Answer: C

 [Watch Video Solution](#)

43. A quadratic equations $p(x) = 0$ having coefficient x^2 unity is such that $p(x) = 0$ and $p(p(x)) = 0$ have a common root, then

A. $p(0)p(1) > 0$

B. $p(0)p(1) < 0$

C. $p(0)p(1) = 0$

D. $p(0) = 0$ and $p(1) = 0$

Answer: C

 [Watch Video Solution](#)

44. If $ax^2 + bx + c = 0$ and $cx^2 + bx + a = 0$ ($a, b, c \in R$) have a common non-real roots, then which of the following is not true ?

A. $-2|a| < |b| < |a|$

B. $-2|c| < b < 2|c|$

C. $a = c$

D. None of these

Answer: D



Watch Video Solution

45. Consider the equation $x^2 + 4x + 3 = m$, $m \in R$

Set of all real values of m so that given equation have four distinct solutions, is

A. 5

B. 6

C. 7

D. 8

Answer: C



[Watch Video Solution](#)

46. If the equation $|x^2 - 5x + 6| - \lambda x + 7\lambda = 0$ has exactly 3 distinct solutions then λ is equal to

A. $-7 + \sqrt{23}$

B. $-9 + 4\sqrt{5}$

C. $-7 - \sqrt{23}$

D. $-9 - 4\sqrt{5}$

Answer: B



[Watch Video Solution](#)

47. Let $\alpha, \beta (a < b)$ be the roots of the equation $ax^2 + bx + c = 0$. If

$$\lim_{x \rightarrow m} \frac{|ax^2 + bx + c|}{ax^2 + bx + c} = 1 \text{ then}$$

A. $\frac{|a|}{a} = -1, m < \alpha$

B. $a > 0, \alpha < m < \beta$

C. $\frac{|a|}{a} = 1, m > \beta$

D. $a < 0, m > \beta$

Answer: C



Watch Video Solution

48. If the quadratic polynomials defined on real coefficient

$P(x) = a_1x^2 + 2b_1x + c_1$ and $Q(x) = a_2x^2 + 2b_2x + c_2$ take positive

values $\forall x \in R$, what can we say for the trinomial

$g(x) = a_1a_2x^2 + b_1b_2x + c_1c_2$?

A. $g(x)$ takes positive values only.

B. $g(x)$ takes negative values only.

C. $g(x)$ can take positive as well as negative values.

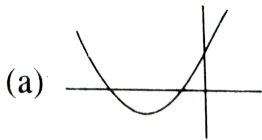
D. Nothing definite can be said about $g(x)$.

Answer: A



Watch Video Solution

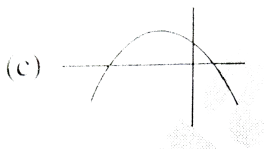
49. For which of the following graphs the quadratic expression $y = ax^2 + bx + c$ the product abc is negative?



A.




B.



C.

(d)



D.

Answer: B



Watch Video Solution

50. The difference of maximum and minimum value of $\frac{x^2 + 4x + 9}{x^2 + 9}$ is

A. $1/3$

B. $2/3$

C. $-2/3$

D. $4/3$

Answer: D



Watch Video Solution

51. If $a > 1$, then the roots of the equation $(1 - a)x^2 + 3ax - 1 = 0$ are

- A. one positive and one negative
- B. both negative
- C. both positive
- D. both non real complex

Answer: C



[Watch Video Solution](#)

52. The values of ' a ' for which the quadratic expression $ax^2 + (a - 2)x - 2$ is negative for exactly two integral values of x , belongs to

- A. $[-1, 1]$
- B. $[1, 2)$

C. $[-1, 1]$

D. $[-2, -1)$

Answer: B



Watch Video Solution

53. If the roots of equation $(a + 1)x^2 - 3ax + 4a = 0$ (a is not equals to -1) are greater than unity, then



Watch Video Solution

54. The equation $ax^4 - 2x^2 - (a - 1) = 0$ will have real and unequal roots if

A. $0 < a < 1$

B. $a > 0, a \neq 1$

C. $a < 0, a \neq 1$

D. none of these

Answer: A



[Watch Video Solution](#)

55. If $ax^2 + bx + c = 0$, $a \neq 0$, $a, b, c \in R$ has distinct real roots in $(1, 2)$, then a and $5a + 2b + c$ have (a) same sign (b) opposite sign (c) not determined (d) none of these

A. same sign

B. opposite sign

C. not determined

D. none of these

Answer: A



[Watch Video Solution](#)

56. If $c < a < b < d$, then roots of the equation

$$bx^2 + (1 - b(c + d))x + bcd - a = 0$$

- A. are real and one lies between c and a
- B. are real and distinct in which one lies between a and b
- C. are real and distinct in which one lies between c and d
- D. are not real

Answer: C



[Watch Video Solution](#)

57. If $2a, b, 2c$ are in $A.P.$ where a, b, c are R^+ , then the expression

$$f(x) = (ax^2 - bx + c)$$
 has

- A. both roots negative
- B. both roots positive
- C. atleast one root between 0 and 2

D. roots are of opposite sign.

Answer: B



[Watch Video Solution](#)

58. If a, b, c are positive numbers such that $a > b > c$ and the equation $(a + b - 2c)x^2 + (b + c - 2a)x + (c + a - 2b) = 0$ has a root in the interval $(-1, 0)$, then

A. b cannot be the $G. M.$ of a, c

B. b may be the $G. M.$ of a, c

C. b is the $G. M.$ of a, c

D. none of these

Answer: A



[Watch Video Solution](#)

59. If the quadratic equation $x^2 - 36x + \lambda = 0$ has roots α and β such that $\alpha, \beta \in N$ and $\frac{\lambda}{5} \notin Z$ and λ assumes minimum possible value then $\frac{\sqrt{\alpha+2}\sqrt{\beta+2}}{|\alpha-\beta|}$ is equal to (a) $\frac{3}{8}$ (b) $\frac{3}{16}$ (c) $\frac{\sqrt{111}}{34}$ (d) $\frac{\sqrt{111}}{17}$

A. $\frac{3}{8}$

B. $\frac{3}{16}$

C. $\frac{\sqrt{111}}{34}$

D. $\frac{\sqrt{111}}{17}$

Answer: A



Watch Video Solution

60. If the equation $2^{2x} + a \cdot 2^{x+1} + a + 1 = 0$ has roots of opposite sign, then the exhaustive set of real values of a is (a) $(-\infty, 0)$ (b) $(-1, -2/3)$ (c) $(-\infty, -2/3)$ (d) $(-1, \infty)$

A. $(-\infty, 0)$

B. $\left(-1, \frac{-2}{3}\right)$

C. $\left(-\infty, \frac{-2}{3}\right)$

D. $(-1, \infty)$

Answer: B



Watch Video Solution

61. Let a, b, c be three distinct non-zero real numbers satisfying the system of equation $\frac{1}{a} + \frac{1}{a-1} + \frac{1}{a-2} = 1$, $\frac{1}{b} + \frac{1}{b-1} + \frac{1}{b-2} = 1$, $\frac{1}{c} + \frac{1}{c-1} + \frac{1}{c-2} = 1$. Then $abc =$ (a) 1 (b) 2 (c) 3 (d) 4

A. 1

B. 2

C. 3

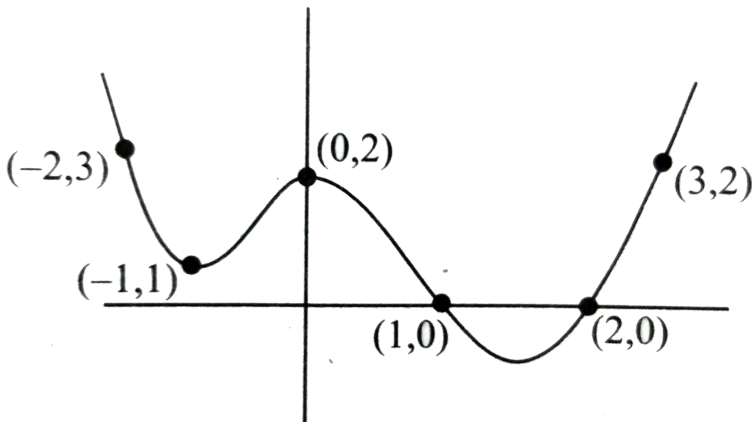
D. 4

Answer: B



Watch Video Solution

62. In the given figure graph of $y = p(x) = x^4 + ax^3 + bx^2 + cx + d$ is given



The product of all imaginary roots of $p(x) = 0$ is (a) 1 (b) 2 (c) $\frac{1}{3}$ (d) $\frac{1}{4}$

A. 1

B. 2

C. $\frac{1}{3}$

D. $\frac{1}{4}$

Answer: A



Watch Video Solution

63. If $a^3 - 3a^2 + 5a - 17 = 0$ and $b^3 - 3b^2 + 5b + 11 = 0$ are such that $a + b$ is a real number, then the value of $a + b$ is

A. -1

B. 1

C. 2

D. -2

Answer: C



Watch Video Solution

64. Let $f(x) = x^4 + ax^3 + bx^2 + cx + d$ be a polynomial with real coefficients and real roots. If $|f(i)|=1$ where $i = \sqrt{-1}$, then the value of a

$+b+c+d$ is

A. -1

B. 1

C. 0

D. can't be determined

Answer: C



[Watch Video Solution](#)

65. If $f(x)$ is a polynomial of degree four with leading coefficient one

satisfying $f(1) = 1, f(2) = 2, f(3) = 3$. then $\left[\frac{f(-1) + f(5)}{f(0) + f(4)} \right]$

A. 4

B. 5

C. 6

D. 7

Answer: B



[Watch Video Solution](#)

66. Let $P(x) = x^6 - x^5 - x^3 - x^2 - x$ and $\alpha, \beta, \gamma, \delta$ are the roots of the equation $x^4 - x^3 - x^2 - 1 = 0$, then

$$P(\alpha) + P(\beta) + P(\gamma) + P(\delta) =$$

A. 4

B. 6

C. 8

D. 12

Answer: B



[Watch Video Solution](#)

67. The line $y = mx + 1$ touches the curves $y = -x^4 + 2x^2 + x$ at two points $P(x_1, y_1)$ and $Q(x_2, y_2)$. The value of $x_1^2 + x_2^2 + y_1^2 + y_2^2$ is

- A. 4
- B. 6
- C. 8
- D. 10

Answer: B



[Watch Video Solution](#)

68. If $a + 2b + 3c = 4$, then find the least value of $a^2 + b^2 + c^2$.

- A. -2
- B. 2
- C. 8
- D. -14

Answer: D

 [Watch Video Solution](#)

69. If the roots of $x^4 + qx^2 + kx + 225 = 0$ are in arithmetic progression, then the value of q , is

A. 15

B. 25

C. 35

D. -50

Answer: D

 [Watch Video Solution](#)

Comprehension

1. $p(x)$ be a polynomial of degree at most 5 which leaves remainder - 1 and 1 upon division by $(x - 1)^3$ and $(x + 1)^3$ respectively, the number of real roots of $P(x) = 0$ is (a) 1 (b) 3 (c) 5 (d) 2

A. 1

B. 3

C. 5

D. 2

Answer: A



[Watch Video Solution](#)

2. $p(x)$ be a polynomial of degree at most 5 which leaves remainder - 1 and 1 upon division by $(x - 1)^3$ and $(x + 1)^3$ respectively, the number of real roots of $P(x) = 0$ is

A. $-\frac{5}{3}$

B. $-\frac{10}{3}$

C. 2

D. -5

Answer: B



Watch Video Solution

3. Let $f(x) = ax^2 + bx + c$, $a \neq 0$, $a, b, c \in I$. Suppose that $f(1) = 0$, $50 < f(7) < 60$ and $70 < f(8) < 80$.

The least value of $f(x)$ is

A. $3/4$

B. $9/2$

C. $-9/8$

D. $3/4$

Answer: C



[Watch Video Solution](#)

4. Let $f(x) = ax^2 + bx + c$, $a \neq 0$, $a, b, c \in I$. Suppose that $f(1) = 0$, $50 < f(7) < 60$ and $70 < f(8) < 80$.

Number of integral values of x for which $f(x) < 0$ is

A. 0

B. 1

C. 2

D. 3

Answer: B



[Watch Video Solution](#)

5. Let α, β be two real numbers satisfying the following relations

$\alpha^2 + \beta^2 = 5$, $3(\alpha^5 + \beta^5) = 11(\alpha^3 + \beta^3)$. Possible value of $\alpha\beta$ is

A. 2

B. $-\frac{10}{3}$

C. -2

D. $\frac{10}{3}$

Answer: A



Watch Video Solution

6. Let α, β be two real numbers satisfying the following relations

$$\alpha^2 + \beta^2 = 5, 3(\alpha^5 + \beta^5) = 11(\alpha^3 + \beta^3)$$

Possible value of $\alpha\beta$ is

A. ± 2

B. ± 3

C. ± 1

D. $\pm\sqrt{3}$

Answer: B



Watch Video Solution

7. Let α, β be two real numbers satisfying the following relations

$$\alpha^2 + \beta^2 = 5, 3(\alpha^5 + \beta^5) = 11(\alpha^3 + \beta^3)$$

Quadratic equation having roots α and β is

A. (a) $x^2 \pm x + 2 = 0$

B. (b) $x^2 \pm 3x - 2 = 0$

C. (c) $x^2 \pm \sqrt{3}x + 2 = 0$

D. (d) none of these

Answer: D



Watch Video Solution

8. Consider quadratic equations $x^2 - ax + b = 0$ and $x^2 + px + q = 0$

If the above equations have one common root and the other roots are reciprocals of each other, then $(q - b)^2$ equals

A. $bq(p-a)^2$

B. $b(p - a)^2$

C. $q(p - a)^2$

D. none of these

Answer: A



[Watch Video Solution](#)

9. Consider quadratic equations $x^2 - ax + b = 0$(i) and

$x^2 + px + q = 0$(ii)

If for the equations (i) and (ii) , one root is common and the equation

(ii) have equal roots, then $b + q$ is equal to

A. $-ap$

B. ap

C. $\frac{1}{2}ap$

D. $2ap$

Answer: C

 [Watch Video Solution](#)

10. Consider quadratic equations $x^2 - ax + b = 0$(i) and $x^2 + px + q = 0$(ii)

If for the equations (i) and (ii), one root is common and the equation (ii) have equal roots, then $b + q$ is equal to

 [Watch Video Solution](#)

11. The polynomial $P(x) = x^3 + ax^2 + bx + c$ has the property that the mean of its roots, the product of its roots, and the sum of its coefficients

are all equal. If the y -intercept of the graph of $y = P(x)$ is 2,

The value of b is

A. -11

B. -9

C. -7

D. 5

Answer: A



[Watch Video Solution](#)

12. The polynomial $P(x) = x^3 + ax^2 + bx + c$ has the property that the mean of its roots, the product of its roots, and the sum of its coefficients are all equal. If the y -intercept of the graph of $y = P(x)$ is 2,

The value of $P(1)$ is

A. 0

B. -1

C. 2

D. -2

Answer: D



Watch Video Solution

Multiple Correct Answer

1. If $c \neq 0$ and the equation $\frac{p}{2x} = \frac{a}{x+c} + \frac{b}{x-c}$ has two equal roots, then p can be

A. $(\sqrt{a} - \sqrt{b})^2$

B. $(\sqrt{a} + \sqrt{b})^2$

C. $a + b$

D. $a - b$

Answer: A::B



Watch Video Solution

2. The equation $(ay - bx)^2 + 4xy = 0$ has rational solutions x, y for

A. $a = \frac{1}{2}, b = 2$

B. $a = 4, b = \frac{1}{8}$

C. $a = 1, b = \frac{3}{4}$

D. $a = 2, b = 1$

Answer: A:C



Watch Video Solution

3. Let a, b, c and $m \in R^+$. The possible value of m (independent of a, b and c) for which atleast one of the following equations have real roots is

$$\left. \begin{aligned} ax^2 + bx + cm &= 0 \\ bx^2 + cx + am &= 0 \\ cx^2 + ax + bm &= 0 \end{aligned} \right\}$$

A. $\frac{1}{2}$

B. $\frac{1}{8}$

C. $\frac{1}{12}$

D. $\frac{1}{4}$

Answer: B::C::D



Watch Video Solution

4. If α, β, γ are the roots of the equation $9x^3 - 7x + 6 = 0$ then the equation $x^3 + Ax^2 + Bx + C = 0$ has roots $3\alpha + 2, 3\beta + 2, 3\gamma + 2$, where

A. $A = 6$

B. $B = -5$

C. $C = 24$

D. $A + B + C = 23$

Answer: C::D

[Watch Video Solution](#)

5. Let ' m ' be a real number, and suppose that two of the three solutions of the cubic equation $x^3 + 3x^2 - 34x = m$ differ by 1. Then possible value of ' m ' is/are

A. (a) 120

B. (b) 80

C. (c) -48

D. (d) -32

Answer: A:C

[Watch Video Solution](#)

6. Let $f(x) = x^3 + x + 1$, let $p(x)$ be a cubic polynomial such that the roots of $p(x) = 0$ are the squares of the roots of $f(x) = 0$, then

A. $p(1) = 3$

B. the value of $P(n), n \in N$ is odd

C. Sum of all roots of $p(x) = 0$ is -2

D. Sum of all product of roots taken two at a time is 1

Answer: A::B::C::D

 [Watch Video Solution](#)

ILLUSTRATION

1. Let $f(x)$ be a quadratic polynomial satisfying $f(2) + f(4) = 0$.

If unity is one root of $f(x) = 0$ then find the other root.

 [Watch Video Solution](#)

2. A polynomial in x of degree 3 vanishes when $x = 1$ and $x = -2$, and has the values 4 and 28 when $x = -1$ and $x = 2$, respectively. Then

find the value of polynomial when $x = 0$.



[Watch Video Solution](#)

3. Let $f(x) = Ax^2 + Bx + c$, where A, B, C are real numbers. Prove that if $f(x)$ is an integer whenever x is an integer, then the numbers $2A, A + B$, and C are all integer. Conversely, prove that if the number $2A, A + B$, and C are all integers, then $f(x)$ is an integer whenever x is integer.



[Watch Video Solution](#)

4. Prove that

$$\frac{ax^2}{(x-a)(x-b)(x-c)} + \frac{bx}{(x-b)(x-c)} + \frac{c}{x-c} + 1$$
$$= \frac{x^3}{(x-a)(x-b)(x-c)}.$$



[Watch Video Solution](#)

5. Find the remainder when $x^2 + 4x^2 - 7x + 6$ is divided by $x - 1$.



Watch Video Solution

6. If the expression $ax^4 + bx^3 - x^2 + 2x + 3$ has remainder $4x + 3$ when divided by $x^2 + x - 2$, find the value of a and b .



Watch Video Solution

7. Let $a \neq 0$ and $P(x)$ be a polynomial of degree greater than 2. If $P(x)$ leaves remainders a and $a - 1$ when divided, respectively, by $x + a$ and $x - a$, then find the remainder when $P(x)$ is divided by $x^2 - a^2$.



Watch Video Solution

8. Given that $x^2 + x - 6$ is a factor of $2x^4 + x^3 - ax^2 + bx + a + b - 1$, find the value of a and b .





Watch Video Solution

9. Use the factor theorem to find the value of k for which $(a + 2b)$, where $a, b \neq 0$ is a factor of $a^4 + 32b^4 + a63b(k + 3)$.



Watch Video Solution

10. If c, d are the roots of the equation $(x - a)(x - b) - k = 0$, prove that a, b are roots of the equation $(x - c)(x - d) + k = 0$.



Watch Video Solution

11. Let $f(x) = x^3 + x + 1$ and $P(x)$ be a cubic polynomial such that $P(0) = -1$ and roots of $f(x) = 1$; $P(x) = 0$ are the squares of the roots of $f(x) = 0$. Then find the value of $P(4)$.



Watch Video Solution

12. Let $f(x)$ be a polynomial with integral coefficients. If $f(1)$ and $f(2)$ both are odd integers, prove that $f(x) = 0$ can't have any integral root.

 [Watch Video Solution](#)

13. Let $a, b \in \mathbb{N}$ and $a > 1$. Also p is a prime number. If $ax^2 + bx + c = p$ for any integral values of x , then prove that $ax^2 + bx + c \neq 2p$ for any integral value of x .

 [Watch Video Solution](#)

14. If $(a^2 - 1)x^2 + (a - 1)x + a^2 - 4a + 3 = 0$ is identity in x , then find the value of a .

 [Watch Video Solution](#)

15. Show that $\frac{(x+b)(x+c)}{(b-a)(c-a)} + \frac{(x+c)(x+a)}{(c-b)(a-b)} + \frac{(x+a)(x+b)}{(a-c)(b-c)} = 1$ is an

identity.

 [Watch Video Solution](#)

16. A certain polynomial $P(x) \in R$ when divided by $x - a$, $x - b$ and $x - c$ leaves remainders a , b , and c , respectively. Then find remainder when $P(x)$ is divided by $(x - a)(x - b)(x - c)$ where a, b, c are distinct.

 [Watch Video Solution](#)

17. If α, β, γ are such that $\alpha + \beta + \gamma = 2$, $\alpha^2 + \beta^2 + \gamma^2 = 6$, $\alpha^3 + \beta^3 + \gamma^3 = 8$, then $\alpha^4 + \beta^4 + \gamma^4$ is a. 18 b. 10 c. 15 d. 36

 [Watch Video Solution](#)

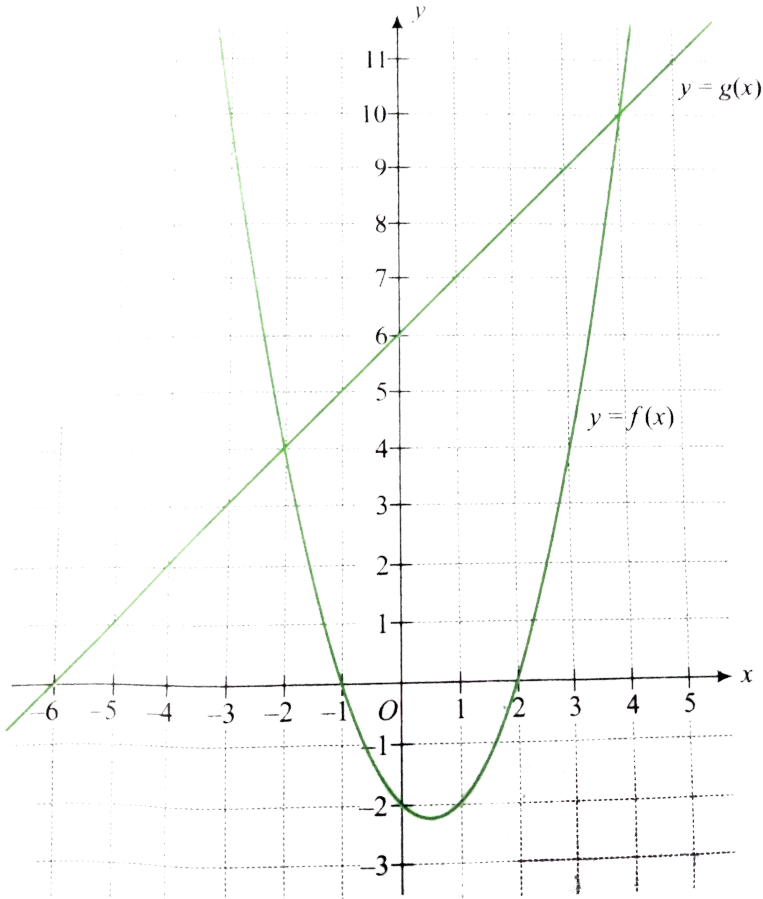
18. If $x + y + z = 12$, $x^2 + Y^2 + z^2 = 96$ and $\frac{1}{x} + \frac{1}{y} + \frac{1}{z} = 36$. Then find the value $x^3 + y^3 + z^3$.

 [Watch Video Solution](#)

19. In how many points graph of $y = x^3 - 3x^2 + 5x - 3$ interest the x-axis?

 [Watch Video Solution](#)

20. Consider the following figure.



Answer the following questions

- (i) What are the roots of the $f(x) = 0$?
- (ii) What are the roots of the $f(x) = 4$?
- (iii) What are the roots of the $f(x) = g(x)$?



Watch Video Solution

21. Which of the following pair of graphs intersect ?

(i) $y = x^2 - x$ and $y = 1$

(ii) $y = x^2 - 2x + 3$ and $y = \sin x$

(iii) $y = x^2 - x + 1$ and $y = x - 4$

 [Watch Video Solution](#)

22. Solve $\frac{x^2 - 2x - 3}{x + 1} = 0$.

 [Watch Video Solution](#)

23. Solve $(x^3 - 4x)\sqrt{x^2 - 1} = 0$.

 [Watch Video Solution](#)

24. Solve $\frac{2x - 3}{x - 1} + 1 = \frac{6x - x^2 - 6}{x - 1}$.

 [Watch Video Solution](#)

25. Evaluate $x = \sqrt{6 + \sqrt{6 + \sqrt{6 + \infty}}}$.

 [Watch Video Solution](#)

26. Sketch the graph of the following functions $y = f(x)$ and find the number of real roots of the corresponding equation $f(x) = 0$.

(i) $f(x) = 2x^3 - 9x^2 + 12x - (9/2)$ (ii) $f(x) = 2x^3 - 9x^2 + 12x - 3$

 [Watch Video Solution](#)

27. Find how many roots of the equations $x^4 + 2x^2 - 8x + 3 = 0$.

 [Watch Video Solution](#)

28. How many real solutions does the equation $x^7 + 14x^5 + 16x^3 + 30x - 560 = 0$ have?





Watch Video Solution

29. Solve $\sqrt{5x^2 - 6x + 8} + \sqrt{5x^2 - 6x - 7} = 1$



Watch Video Solution

30. Solve $(x^2 - 5x + 7) - (x - 2)(x - 3) = 1$.



Watch Video Solution

31. Solve the equation $4^x - 5 \times 2^x + 4 = 0$.



Watch Video Solution

32. Solve the equation $12^x - 56x^2 + 89x^2 - 56x + 12 = 0$.



Watch Video Solution

33. Solve the equation $3x^{2-x} + 4x^2 = 25$.

 [Watch Video Solution](#)

34. Solve the equation $(x - 1)^4 + (x - 5)^4 = 82$.

 [Watch Video Solution](#)

35. Solve the equation $(x + 2)(x + 3)(x + 8) \times (x + 12) = 4x^2$.

 [Watch Video Solution](#)

36. If the roots of the equation $x^2 - 8x + a^2 - 6a = 0$ are real distinct, then find all possible value of a .

 [Watch Video Solution](#)

37. If the roots of the equation $a(b - c)x^2 + b(c - a)x + c(a - b) = 0$ are equal, show that $2/b = 1/a + 1/c$.

 [Watch Video Solution](#)

38. Prove that the roots of the equation $(a^4 + b^4)x^2 + 4abcdx + (c^4 + d^4) = 0$ cannot be different, if real.

 [Watch Video Solution](#)

39. If roots of equation $x^3 - 2cx + ab = 0$ are real and unequal, then prove that the roots of $x^2 - 2(a + b)x + a^2 + b^2 + 2c^2 = 0$ will be imaginary.

 [Watch Video Solution](#)

40. Find the quadratic equation with rational coefficients whose one root is $1/(2 + \sqrt{5})$.

 [Watch Video Solution](#)

41. If $f(x) = ax^2 + bx + c$, $g(x) = -ax^2 + bx + c$, where $ac \neq 0$, then prove that $f(x)g(x) = 0$ has at least two real roots.

 [Watch Video Solution](#)

42. If $a, b, c(abc^2)x^2 + 3a^2cx + b^2cx - 6a^2 - ab + 2b^2 = 0$ are rational.

 [Watch Video Solution](#)

43. If $a > 0$ and $b^2 - 4ac = 0$ then solve $ax^3 + (a + b)x^2 + (b + c)x + c > 0$.





[Watch Video Solution](#)

44. If $a, b,$ and c are odd integers, then prove that roots of $ax^2 + bx + c = 0$ cannot be rational.



[Watch Video Solution](#)

45. If a and c are odd prime numbers and $ax^2 + bx + c = 0$ has rational roots, where $b \in I$, prove that one root of the equation will be independent of $a, b,$



[Watch Video Solution](#)

46. Find the range of the function $f(x) = x^2 - 2x - 4$



[Watch Video Solution](#)

47. Find the least value of $\frac{(6x^2 - 22x + 21)}{(5x^2 - 18x + 17)}$ for real x .

 [Watch Video Solution](#)

48. Prove that if the equation $x^2 + 9y^2 - 4x + 3 = 0$ is satisfied for real values of x and y , then x must lie between 1 and 3 and y must lie between $1/3$ and $1/3$.

 [Watch Video Solution](#)

49. The least value of the expression $x^2 + 4y^2 + 3z^2 - 2x - 12y - 6z + 14$ is 3 b. no least value c. 0 d. none of these

 [Watch Video Solution](#)

50. Find the linear factors of $2x^2 - y^2 - x + xy + 2y - 1$.



[Watch Video Solution](#)

51. If the expression $2x^2 + mxy + 3y^2 - 5y - 2$ can be resolved into two rational factors, the value of $|m|$ is



[Watch Video Solution](#)

52. Form a quadratic equation whose roots are -4 and 6 .



[Watch Video Solution](#)

53. Form a quadratic equation with real coefficients whose one root is $3 - 2i$.



[Watch Video Solution](#)

54. If roots of the equation $ax^2 + bx + c = 0$ are α and β , find the equation whose roots are $\frac{1}{\alpha}, \frac{1}{\beta}$ (ii) $-\alpha, -\beta$ (iii) $\frac{1-\alpha}{1+\alpha}, \frac{1-\beta}{1+\beta}$

 [Watch Video Solution](#)

55. If α, β are the roots of the equation $2x^2 - 3x - 6 = 0$, find the equation whose roots are $\alpha^2 + 2$ and $\beta^2 + 2$.

 [Watch Video Solution](#)

56. If $\alpha \neq \beta$ and $\alpha^2 = 5\alpha - 3$ and $\beta^2 = 5\beta - 3$. find the equation whose roots are α/β and β/α .

 [Watch Video Solution](#)

57. If roots of equation $3x^2 + 5x + 1 = 0$ are $(\sec \theta_1 - \tan \theta_1)$ and $(\operatorname{cosec} \theta_2 - \cot \theta_2)$, then find the equation whose

roots are $(\sec \theta_1 + \tan \theta_1)$ and $(\operatorname{cosec} \theta_2 + \cot \theta_2)$.

 [Watch Video Solution](#)

58. If $ab + bc + ca = 0$, then solve

$$a(b - 2c)x^2 + b(c - 2a)x + c(a - 2b) = 0.$$

 [Watch Video Solution](#)

59. If $a, b, \text{ and } c$ are in A.P. and one root of the equation $ax^2 + bc + c = 0$ is 2, then find the other root.

 [Watch Video Solution](#)

60. If α is a root of the equation $x^2 + 2x - 1 = 0$, then prove that $4\alpha^2 - 3\alpha$ is the other root.

 [Watch Video Solution](#)

61. If the roots of the quadratic equation $x^2 + px + q = 0$ are $\tan 23^\circ$ and $\tan 22^\circ$, then find the value of $q - p$.

 [Watch Video Solution](#)

62. The sum of roots of equation $\frac{1}{x+a} + \frac{1}{x+b} = \frac{1}{c}$ is zero find the product of roots of equation a) 0 b) $\left(\frac{a+b}{2}\right)$ c) $-\left(\frac{a^2+b^2}{2}\right)$ d) $2(a^2+b^2)$

 [Watch Video Solution](#)

63. Solve the equation $x^2 + px + 45 = 0$. it is given that the squared difference of its roots is equal to 144

 [Watch Video Solution](#)

64. If α, β are the roots of the equation $2x^2 - 35x + 2 = 0$, then find the value of $(2\alpha - 35)^3(2\beta - 35)^3$.

 [Watch Video Solution](#)

65. Find a quadratic equation whose product of roots x_1 and x_2 is equal to 4 and satisfying the relation $\frac{x_1}{x_1 - 1} + \frac{x_2}{x_2 - 1} = 2$.

 [Watch Video Solution](#)

66. If roots of the equation $(q - r)x^2 + (r - p)x + (p - q) = 0$ are equal then p, q, r are in

 [Watch Video Solution](#)

67. Let $\alpha, \beta \in R$. If α, β^2 are the roots of quadratic equation $x^2 - px + 1 = 0$. and α^2, β are the roots of quadratic equation

$x^2 - qx + 8 = 0$, then find $p, 1, \alpha, \beta$.



Watch Video Solution

68. If α, β are roots of $x^2 \pm px + 1 = 0$ and γ, δ are the roots of $x^2 + qx + 1 = 0$, then prove that $q^2 - p^2 = (\alpha - \gamma)(\beta - \gamma)(\alpha + \delta)(\beta + \delta)$.



Watch Video Solution

69. If the ratio of the roots of the equation $x^2 + px + q = 0$ are equal to ratio of the roots of the equation $x^2 + bx + c = 0$, then prove that $p^2c = b^2q$.



Watch Video Solution

70. Let $n \in \mathbb{Z}$ and $\triangle ABC$ be a right triangle with angle at C . If $\sin A$ and $\sin B$ are the roots of the quadratic equation

$(5n + 8)x^2 - (7n - 20)x + 120 = 0$, then find the value of n .

 [Watch Video Solution](#)

71. Find the value of a for which one root of the quadratic equation

$(a^2 - 5a + 3)x^2 + (3a - 1)x + 2 = 0$ is twice as large as the other.

 [Watch Video Solution](#)

72. Find the values of the parameter a such that the roots α, β of the

equation $2x^2 + 6x + a = 0$ satisfy the inequality $\alpha/\beta + \beta/\alpha < 2$.

 [Watch Video Solution](#)

73. Let a, b, c be real numbers with $a \neq 0$ and α, β be the roots of the

equation $ax^2 + bx + c = 0$. Express the roots of $a^3x^2 + abcx + c^3 = 0$

in terms of α, β .

 [Watch Video Solution](#)

74. Let α and β be the roots of $x^2 - 5x - 1 = 0$ then find the value of
$$\frac{\alpha^{15} + \alpha^{11} + \beta^{15} + \beta^{11}}{\alpha^{13} + \beta^{13}} .$$



Watch Video Solution

75. If α, β are the roots of the equation $ax^2 + bx + c = 0$, then find the roots of the equation $ax^2 - bx(x - 1) + c(x - 1)^2 = 0$ in term of α and β .



Watch Video Solution

76. If α and β are roots of the equation $a \cos \theta + b \sin \theta = c$, then find the value of $\tan(\alpha + \beta)$.



Watch Video Solution

77. Determine the values of m for which equations $3x^2 + 4mx + 2 = 0$ and $2x^2 + 3x - 2 = 0$ may have a common root.

 [Watch Video Solution](#)

78. If $ax^2 + bx + c = 0$ and $bx^2 + cx + a = 0$ have a common root and a , b , and c are nonzero real numbers, then find the value of $(a^3 + b^3 + c^3) / abc$

 [Watch Video Solution](#)

79. If $x^2 + px + q = 0$ and $x^2 + qx + p = 0$, ($p \neq q$) have a common roots, show that $p + q = 0$. Also, show that their other roots are the roots of the equation $x^2 + x + pq = 0$.

 [Watch Video Solution](#)

80. If equations $x^2 + ax + 12 = 0$, $x^2 + bx + 15 = 0$ and $x^2 + (a + b)x + 36 = 0$, have a common positive root, then find the values of a and b .

 [Watch Video Solution](#)

81. If $x^2 + 3x + 5 = 0$ and $ax^2 + bx + c = 0$ have common root/roots and $a, b, c \in N$, then find the minimum value of $a + b + c$.

 [Watch Video Solution](#)

82. If a, b, p, q are non zero real numbers, then how many common roots would two equations: $2a^2x^2 - 2abx + b^2 = 0$ and $p^2x^2 + 2pqx + q^2 = 0$ have?

 [Watch Video Solution](#)

83. a, b, c are positive real numbers forming a G.P. If $ax^2 + 2bx + c = 0$ and $dx^2 + 2ex + f = 0$ have a common root, then prove that $d/a, e/b, f/c$ are in A.P.



Watch Video Solution

84. Find the condition on a, b, c, d such that equations $2ax^3 + bx^2 + cx + d = 0$ and $2ax^2 + 3bx + 4c = 0$ have a common root.



Watch Video Solution

85. Number of positive integers x for which $f(x) = x^3 - 8x^2 + 20x - 13$ is a prime number is_____.



Watch Video Solution

86. If r is positive real number such that $4\sqrt{r} - \frac{1}{4\sqrt{r}} = 4$, then find the value of $6\sqrt{r} + \frac{1}{6\sqrt{r}}$.

 [Watch Video Solution](#)

87. If α , β and γ the roots of the equation $x^3 + 3x^2 - 4x - 2 = 0$.

then find the values of the following expressions:

(i) $\alpha^2 + \beta^2 + \gamma^2$

(ii) $\alpha^3 + \beta^3 + \gamma^3$

(iii) $\frac{1}{\alpha} + \frac{1}{\beta} + \frac{1}{\gamma}$

 [Watch Video Solution](#)

88. If α , β , γ are the roots of the equation $x^3 + 4x + 1 = 0$ then

$(\alpha + \beta)^{-1} + (\beta + \gamma)^{-1} + (\gamma + \alpha)^{-1} =$

 [Watch Video Solution](#)

89. Equations $x^3 + 5x^2 + px + q = 0$ and $x^3 + 7x^2 + px + r = 0$ have two roots in common. If the third root of each equation is x_1 and x_2 , respectively, then find the ordered pair *[Math Processing Error]*



Watch Video Solution

90. If α, β and γ are the roots of the equation $x^3 + 3x^2 - 24x + 1 = 0$ then find the value of $(3\sqrt{\alpha} + 3\sqrt{\beta} + 3\sqrt{\gamma})$.



Watch Video Solution

91. If equation $x^3 + ax^2 + bx + c = 0$, where $a, b, c \in \mathbb{Q}(a \neq 1)$. If the real roots of the equation are x_1, x_2 and x_1x_2 , then prove that x_1x_2 is rational.



Watch Video Solution

92. Solve the equation $x^3 - 13x^2 + 15x + 189 = 0$ if one root exceeds the other by 2.

 [Watch Video Solution](#)

93. In equation $x^4 - 2x^3 + 4x^2 + 6x - 21 = 0$ if two its roots are equal in magnitude but opposite e in find the roots.

 [Watch Video Solution](#)

94. If $b^2 < 2ac$, then prove that $ax^2 + bx^2 + cx + d = 0$ has exactly one real root.

 [Watch Video Solution](#)

95. If $f(x) = x^2 + bx^2 + cx + d$ and $f(0), f(-1)$ are odd integers, prove that $f(x) = 0$ cannot have all integral roots.

[Watch Video Solution](#)

96. If $x - c$ is a factor of order m of the polynomial $f(x)$ of degree n ($1 < m < n$), then find the polynomials for which $x = c$ is a root.

[Watch Video Solution](#)

97. What is the minimum height of any point on the curve $y = x^2 - 4x + 6$ above the x-axis?

[Watch Video Solution](#)

98. What is the maximum height of any point on the curve $y = -x^2 + 6x - 5$ above the x-axis?

[Watch Video Solution](#)

99. Find the largest natural number a for which the maximum value of $f(x) = a - 1 + 2x - x^2$ is smaller than the minimum value of $g(x) = x^2 - 2ax = 10 - 2a$.



[Watch Video Solution](#)

100. Let $f(x) = ax^2 + bx + c$ be a quadratic expression having its vertex at $(3, -2)$ and value of $f(0) = 10$. Find $f(x)$.



[Watch Video Solution](#)

101. Find the least value of n such that $(n - 2)x^2 + x + n + 4 > 0, \forall x \in R, \text{ where } n \in N$.



[Watch Video Solution](#)

102. Given that a, b, c are distinct real numbers such that expressions $ax^2 + bx + c, bx^2 + cx + a$ and $cx^2 + ax + b$ are always non-negative.

Prove that the quantity $(a^2 + b^2 + c^2) / (ab + bc + ca)$ can never lie in $(-\infty, 1)$.

 [Watch Video Solution](#)

103. For $a \in \mathbb{R}$, if $|x - a + 3| + |x - 3a| = |2x - 4a + 3|$ is true $\forall x \in \mathbb{R}$. Then find the value of a .

 [Watch Video Solution](#)

104. If c is positive and $2ax^2 + 3bx + 5c = 0$ does not have any real roots, then prove that $2a - 3b + 5c > 0$.

 [Watch Video Solution](#)

105. If $ax^2 + bx + 6 = 0$ does not have distinct real roots, then find the least value of $3a + b$.

 [Watch Video Solution](#)

106. A quadratic trinomial $P(x) = ax^2 + bx + c$ is such that the equation $P(x) = x$ has 0 real roots. Prove that in this case equation $P(P(x)) = x$ has no real roots either.

 [Watch Video Solution](#)

107. If the inequality $(mx^2 + 3x + 4 + 2x) / (x^2 + 2x + 2) < 5$ is satisfied for all $x \in R$, then find the value of m .

 [Watch Video Solution](#)

108. Find the values of k for which $\left| \frac{x^2 + kx + 1}{x^2 + x + 1} \right| < 2, \forall x \in R$

 [Watch Video Solution](#)

109. If $x \in \mathbb{R}$, and a, b, c are in ascending or descending order of magnitude, show that $(x - a)(x - c)/(x - b)$ (where $x \neq b$) can assume any real value.

 [Watch Video Solution](#)

110. Let $x^2 - (m - 3)x + m = 0$ ($m \in \mathbb{R}$) be a quadratic equation. Find the value of m for which the roots are

(i) real and distinct

(ii) equal

(iii) not real

 [Watch Video Solution](#)

111. If α is a real root of the quadratic equation $ax^2 + bx + c = 0$ and β is a real root of $-ax^2 + bx + c = 0$, then show that there is a root γ of

equation $(a/2)x^2 + bx + c = 0$ which lies between α and β .



[Watch Video Solution](#)

112. The equation $ax^2 - bx + c = 0$ has real and positive roots. Prove that the roots of the equation $ad^2x^2 + a(3b - 2c)x + (2b - c)(b - c) + ac = 0$ are real and positive.



[Watch Video Solution](#)

113. For what real values of a do the roots of the equation $x^2 - 2x - (a^2 - 1) = 0$ lie between the roots of the equation $x^2 - 2(a + 1)x + a(a - 1) = 0$.



[Watch Video Solution](#)

114. If $(x^2 + x + 2)^2 = (a - 3)(x^2 + x + 1)(x^2 + x + 2) + (a - 4)(x^2 + x + 1)^2$

has at least one root, then find the complete set of values of a .

 [Watch Video Solution](#)

115. Find all real value of a for which the equation $x^4 + (a - 1)x^3 + x^2 + (a - 1)x + 1 = 0$ possesses at least two distinct positive roots

 [Watch Video Solution](#)

116. If the equation $\sin^2 x - k \sin x - 3 = 0$ has exactly two distinct real roots in $[0, \pi]$, then find the values of k .

 [Watch Video Solution](#)

117. Find all the value of m for which the equation $\sin^2 x + (m - 3)\sin x + m = 0$ has real roots.

 [Watch Video Solution](#)

118. If $2a + 3b + 6c = 0$, then prove that at least one root of the equation $ax^2 + bx + c = 0$ lies in the interval $(0,1)$.



Watch Video Solution

119. Find the value of a for which $ax^2 + (a - 3)x + 1 < 0$ for at least one positive real x .



Watch Video Solution

120. If $x^2 + 2ax + a < 0 \forall x \in [1, 2]$, then find the values of a .



Watch Video Solution

121. If $(y^2 - 5y + 3)(x^2 + x + 1) < 2x$ for all $x \in R$, then find the interval in which y lies.



 Watch Video Solution

122. The values of 'a' for which $4^x - (a - 4)2^x + \frac{9a}{4} < 0 \forall x \in (1, 2)$ is

 Watch Video Solution

SOLVED EXAMPLES

1. IF $[x^2 - 2x + a] = 0$ has no solution, then find the values of a (where $[\cdot]$ represents the greatest integer).

 Watch Video Solution

2. If $a_1x^3 + b_1x^2 + c_1x + d_1 = 0$ and $a_2x^3 + b_2x^2 + c_2x + d_2 = 0$

a pair of repeated roots common, then prove that

$$\begin{vmatrix} 3a_1, & 2b_1, & c_1 \\ 3a_2, & 2b_2, & c_2 \\ a_2b_1 - a_1b_2, & c_2a_1 - c_1a_2, & d_1a_2 - d_2a_1 \end{vmatrix} = 0$$

 Watch Video Solution

3. Let S be a square of unit area. Consider any quadrilateral which has one vertex on each side of S . If a, b, c and d denote the lengths of sides of the quadrilateral, prove that $2 \leq a^2 + b^2 + c^2 + d^2 \leq 4$

 [Watch Video Solution](#)

4. Show that the minimum value of $(x+a)(x+b)/(x+c)$ where $a > c, b > c$, is $(\sqrt{a-c} + \sqrt{b-c})^2$ for real values of x .

 [Watch Video Solution](#)

5. Let $f(x), g(x)$, and $h(x)$ be the quadratic polynomials having positive leading coefficients and real and distinct roots. If no pair of them has a common roots, then find the roots of $f(x) + g(x) + h(x) = 0$.

 [Watch Video Solution](#)

6. If the slope of one of the pairs of lines represented by equation $a^3x^2 + 2hxy + b^3y^2 = 0$ is square of the other, then prove that $ab(a + b) = -2h$.



Watch Video Solution

7. If $f(x) = (a_1x + b_1)^2 + (a_2x + b_2)^2 + \dots + (a_nx + b_n)^2$, then prove that

$$(a_1b_1 + a_2b_2 + \dots + a_nb_n)^2 \leq (a_1^2 + a_2^2 + \dots + a_n^2)(b_1^2 + b_2^2 + \dots + b_n^2).$$



Watch Video Solution

8. Find the values of a for which the expression $\frac{ax^2 + 3x - 4}{3x - 4x^2 + a}$ assumes all real values for all real values of x



Watch Video Solution

9. Let a, b and c be real numbers such that $a + 2b + c = 4$. Find the maximum value of $(ab + bc + ca)$.

 [Watch Video Solution](#)

10. If $x^4 + 2kx^3 + x^2 + 2kx + 1 = 0$

has exactly two distinct positive and two distinct negative roots, then find the possible real values of k .

 [Watch Video Solution](#)

11. Find the value of a for which the equation $\sin\left(x + \frac{\pi}{4}\right) = \sin 2x + 9$ will have real solution.

 [Watch Video Solution](#)

12. Prove that if $2a_0^2 < 15a$, all roots of $x^5 - a_0x^4 + 3ax^3 + bx^2 + cx + d = 0$ cannot be real. It is given that $a_0, a, b, c, d \in R$.

 [Watch Video Solution](#)

13. Find the values 'a' for which the function $f(x) = (a + 2)x^3 - 3ax^2 + 9ax - 1$ decreases for all real values of x .

 [Watch Video Solution](#)

14. Find the number of points of local extrema of $f(x) = 3x^4 - 4x^3 + 6x^2 + ax + b$ where $a, b \in R$

 [Watch Video Solution](#)

1. If $x = 1$ and $x = 2$ are solutions of equations $x^3 + ax^2 + bx + c = 0$ and $a + b = 1$, then find the value of b .

 [Watch Video Solution](#)

2. If $(1 - p)$ is a root of quadratic equation $x^2 + px + (1 - p) = 0$, then find its roots.

 [Watch Video Solution](#)

3. The quadratic polynomial $p(x)$ has following properties $p(x)$ can be positive or zero for all real numbers $p(1) = 0$ and $p(2) = 2$. Then find the quadratic polynomial.

 [Watch Video Solution](#)

1. Given that the expression $2x^3 + 3px^2 - 4x + p$ has a remainder of 5 when divided by $x + 2$, find the value of p .

 [Watch Video Solution](#)

2. Determine the value of k for which $x + 2$ is a factor of $(x + 1)^7 + (2x + k)^3$.

 [Watch Video Solution](#)

3. If $f(x) = x^3 - 3x^2 + 2x + a$ is divisible by $x - 1$, then find the remainder when $f(x)$ is divided by $x - 2$.

 [Watch Video Solution](#)

4. If $f(x) = x^3 = x^2 + ax + b$ is divisible by $x^2 - x$, then find the value of $f(2)$.



 Watch Video Solution

5. Let the equation $x^5 + x^3 + x^2 + 2 = 0$ has roots x_1, x_2, x_3, x_4 and x_5 , then find the value of $(x_1^2 - 1)(x_2^2 - 1)(x_3^2 - 1)(x_4^2 - 1)(x_5^2 - 1)$.

 Watch Video Solution

CONCEPT APPLICATION EXERCISE 2.3

1. The number of values of a for which $(a^2 - 3a + 2)x^2 + (a^2 - 5a + 6)x + a^2 - 4 = 0$ is an identity in x is

 Watch Video Solution

2. If $x^2 + ax + 1$ is a factor of $ax^3 + bx + c$, then which of the following conditions are not valid: a. $a^2 + c = 0$ b. $b - a = ac$ c. $c^3 + c + b^2 = 0$ d. $2c + a = b$



Watch Video Solution

3. If $a + b + c = 0$ and $a^2 + b^2 + c^2 = 4$, then find the value of $a^4 + b^4 + c^4$.



Watch Video Solution

CONCEPT APPLICATION EXERCISE 2.4

1. Prove that graphs of $y = x^2 + 2$ and $y = 3x - 4$ never intersect.



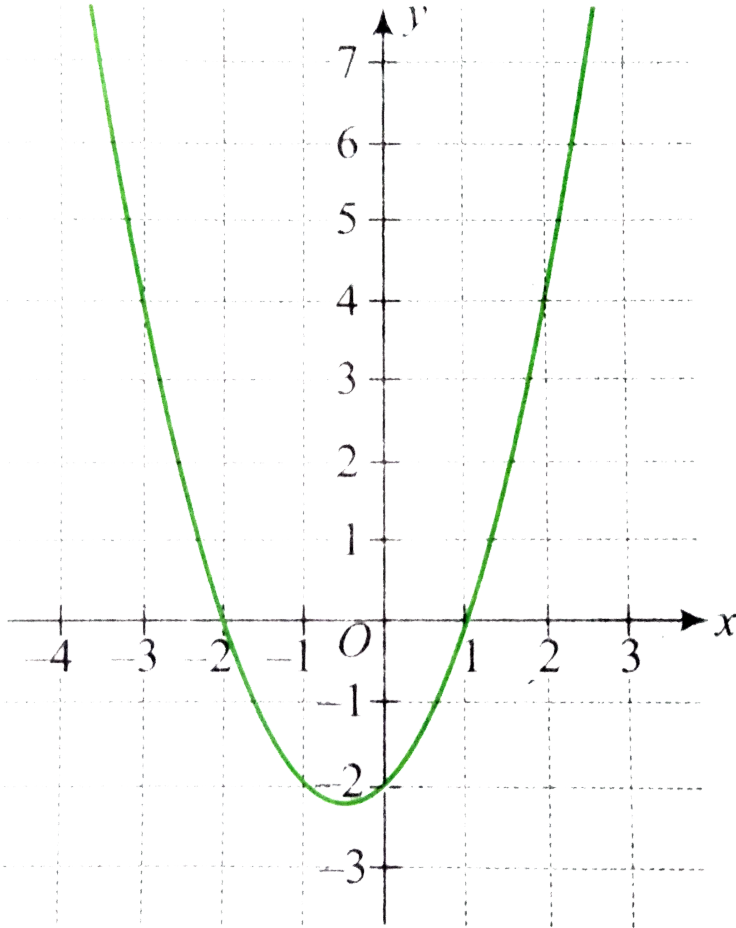
Watch Video Solution

2. In how many points the line $y + 14 = 0$ cuts the curve whose equation is $x(x^2 + x + 1) + y = 0$?



Watch Video Solution

3. Graph of $y = f(x)$ is as shown in the following figure.



Find the roots of the following equations

$$f(x) = 0$$

$$f(x) = 4$$

$$f(x) = x + 2$$



Watch Video Solution

CONCEPT APPLICATION EXERCISE 2.5

1. Solve $\frac{x^2 + 3x + 2}{x^2 - 6x - 7} = 0$.

 [Watch Video Solution](#)

2. Solve $\sqrt{x - 2} + \sqrt{4 - x} = 2$.

 [Watch Video Solution](#)

3. Solve $\sqrt{x - 2}(x^2 - 4x - 5) = 0$.

 [Watch Video Solution](#)

4. Solve $\sqrt{x + 5}\sqrt{x + 21} = \sqrt{6x + 40}$.

 [Watch Video Solution](#)

CONCEPT APPLICATION EXERCISE 2.6

1. How many roots of the equation $3x^4 + 6x^3 + x^2 + 6x + 3 = 0$ are real ?

 [Watch Video Solution](#)

2. Find the value of a if $x^3 - 3x + a = 0$ has three distinct real roots.

 [Watch Video Solution](#)

3. Analyze the roots of the equation $(x - 1)^3 + (x - 2)^3 + (x - 4)^3 + (x - 5)^3 = 0$ by differentiation method.

 [Watch Video Solution](#)

4. In how many points the graph of $f(x) = x^3 + 2x^2 + 3x + 4$ meets the x -axis?

 [Watch Video Solution](#)

CONCEPT APPLICATION EXERCISE 2.7

1. Solve the equation $x(x + 2)(x^2 - 1) = -1$.

 [Watch Video Solution](#)

2. Solve $(x^2 + 2)^2 + 8x^2 = 6x(x^2 + 2)$

 [Watch Video Solution](#)

3. Find the value of $2 + \frac{1}{2 + \frac{1}{2 + \frac{1}{2 + \dots}}}$

 [Watch Video Solution](#)

4. Solve $4^x + 6^x = 9^x$.

 [Watch Video Solution](#)

5. Solve $3^{(2x^2-7x+7)} = 9$

 [Watch Video Solution](#)

6. Solve $\frac{8^x + 27^x}{12^x + 18^x} = \frac{7}{6}$

 [Watch Video Solution](#)

7. Solve $\sqrt{3x^2 - 7x - 30} + \sqrt{2x^2 - 7x - 5} = x + 5$.

 [Watch Video Solution](#)

8. Solve $\sqrt{5x^2 - 6x + 8} + \sqrt{5x^2 - 6x - 7} = 1$.



Watch Video Solution

9. Solve $\sqrt{x^2 + 4x - 21} + \sqrt{x^2 - x - 6} = \sqrt{6x^2 - 5x - 39}$.



Watch Video Solution

CONCEPT APPLICATION EXERCISE 2.8

1. If $a, b, c \in R^+$ and $2b = a + c$, then check the nature of roots of equation $ax^2 + 2bx + c = 0$.



Watch Video Solution

2. Find the condition if the roots of $ax^2 + 2bx + c = 0$ and $bx^2 - 2\sqrt{ac}x + b = 0$ are simultaneously real.



Watch Video Solution

3. if $a < c < b$, then check the nature of roots of the equation

$$(a - b)^2 x^2 + 2(a + b - 2c)x + 1 = 0$$



Watch Video Solution

4. If $a + b + c = 0$ then check the nature of roots of the equation

$$4ax^2 + 3bx + 2c = 0 \text{ where } a, b, c \in \mathbb{R}.$$



Watch Video Solution

5. Find the greatest value of a non-negative real number λ for which both the equations $2x^2 + (\lambda - 1)x + 8 = 0$ and $x^2 - 8x + \lambda + 4 = 0$ have real roots.



Watch Video Solution

6. If $a, b, c \in \mathbb{R}$ such that $a + b + c = 0$ and $a \neq c$, then prove that the roots of $(b + c - a)x^2 + (c + a - b)x + (a + b - c) = 0$ are real and distinct.

 [Watch Video Solution](#)

7. If $p, q \in \{1, 2, 3, 4, 5\}$, then find the number of equations of form $p^2x^2 + q^2x + 1 = 0$ having real roots.

 [Watch Video Solution](#)

8. Find the range of $f(x) = x^2 - x - 3$.

 [Watch Video Solution](#)

9. Find the range of $f(x) = \frac{x^2 + 34x - 71}{x^2 + 2x - 7}$ $f(x) = \frac{x^2 - x + 1}{x^2 + x + 1}$

 [Watch Video Solution](#)

10. Find the range of $f(x)\sqrt{x-1} + \sqrt{5-1}$

 [Watch Video Solution](#)

11. If $x, y \in R$ satisfy the equation $x^2 + y^2 - 4x - 2y + 5 = 0$, then the value of the expression $\frac{(\sqrt{x} - \sqrt{y})^2 + 4\sqrt{xy}}{(x + \sqrt{xy})}$ is

 [Watch Video Solution](#)

CONCEPT APPLICATION EXERCISE 2.9

1. If the product of the roots of the equation $(a+1)x^2 + (2a+3)x + (3a+4) = 0$ is 2, then find the sum roots.

 [Watch Video Solution](#)

2. Find the value of a for which the sum of the squares of the roots of the equation $x^2 - (a - 2)x - a - 1 = 0$ assumes the least value.

 [Watch Video Solution](#)

3. If x_1 , and x_2 are the roots of $x^2 + (\sin \theta - 1)x - \frac{1}{2 \cos^2 \theta} = 0$, then find the maximum value of $x_1^2 + x_2^2$.

 [Watch Video Solution](#)

4. If $\tan \theta$ and $\sec \theta$ are the roots of $ax^2 + bx + c = 0$, then prove that $a^4 = b^2(b^2 - 4ac)$.

 [Watch Video Solution](#)

5. If the roots of $x^2 - bx + c = 0$ are two consecutive integers then $b^2 - 4c =$



[Watch Video Solution](#)

6. If the roots of the equation $12x^2 - mx + 5 = 0$ are in the ratio 2:3 then find the value of m .

[Watch Video Solution](#)

7. If α and β are the roots of $x^2 - p(x + 1) - c = 0$, then the value of $\frac{\alpha^2 + 2\alpha + 1}{\alpha^2 + 2\alpha + c} + \frac{\beta^2 + 2\beta + 1}{\beta^2 + 2\beta + c}$

[Watch Video Solution](#)

8. If the equation formed by decreasing each root of the $ax^2 + bx + c = 0$ by 1 $2x^2 + 8x + 2 = 0$. Find the condition.

[Watch Video Solution](#)

9. If α and β are the roots of $x^2 - a(x - 1) + b = 0$ then find the value of $1/(\alpha^2 - a\alpha) + 1/(\beta^2 - \beta) + 2/a + b$.

 [Watch Video Solution](#)

10. Find the range of $f(x) = \sqrt{x - 1} + \sqrt{5 - x}$

 [Watch Video Solution](#)

11. Let α, β be the roots of $x^2 + bx + 1 = 0$. Then find the equation whose roots are $-(\alpha + 1/\beta)$ and $-(\beta + 1/\alpha)$.

 [Watch Video Solution](#)

12. If the sum of the roots of an equation is 2 and the sum of their cubes is 98, then find the equation.

 [Watch Video Solution](#)

CONCEPT APPLICATION EXERCISE 2.10

1. If $x^2 + ax + b = 0$ and $x^2 + bx + ca = 0$ ($a \neq b$) have a common root, then prove that their other roots satisfy the equation $x^2 + cx + ab = 0$.



[Watch Video Solution](#)

2. Find the condition that the expressions $ax^2 - bxy + cy^2$ and $a_1x^2 + b_1xy + c_1y^2$ may have factors $y - mx$ and $my - x$, respectively.



[Watch Video Solution](#)

3. If $a, b, c \in R$ and equations $ax^2 + bx + c = 0$ and $x^2 + 2x + 9 = 0$ have a common root, then find $a : b$.



[Watch Video Solution](#)

4. If the equations $x^3 - mx^2 - 4 = 0$ and $x^3 + mx + 2 = 0$. $m \in R$ have one common root, then find the values of m .

 [Watch Video Solution](#)

5. If a, b, c be the sides of ABC and equations $ax^2 + bx + c = 0$ and $5x^2 + 12x + 13 = 0$ have a common root, then find $\angle C$.

 [Watch Video Solution](#)

CONCEPT APPLICATION EXERCISE 2.11

1. Let a is a real number satisfying $a^3 + \frac{1}{a^3} = 18$. Then the value of $a^4 + \frac{1}{a^4} - 39$ is ____.

 [Watch Video Solution](#)

2. If two roots of $x^3 - ax^2 + bx - c = 0$ are equal in magnitude but opposite in signs, then prove that $ab = c$

 [Watch Video Solution](#)

3. If α, β and γ are the roots of $x^2 + 8 = 0$ then find the equation whose roots are α^2, β^2 and γ^2 .

 [Watch Video Solution](#)

4. If α, β, γ are the roots of the equation $x^3 - px + q = 0$, then find the cubic equation whose roots are $\alpha/(1 + \alpha), \beta/(1 + \beta), \gamma/(1 + \gamma)$.

 [Watch Video Solution](#)

5. If the roots of equation $x^3 + ax^2 + b = 0$ are α_1, α_2 , and α_3 ($a, b \neq 0$). Then find the equation whose roots are

$$\frac{\alpha_1\alpha_2 + \alpha_2\alpha_3}{\alpha_1\alpha_2\alpha_3}, \frac{\alpha_2\alpha_3 + \alpha_3\alpha_1}{\alpha_1\alpha_2\alpha_3}, \frac{\alpha_1\alpha_3 + \alpha_1\alpha_2}{\alpha_1\alpha_2\alpha_3}.$$



Watch Video Solution

6. If α, β and γ are roots of $2x^3 + x^3 - 7 = 0$, then find the value of

$$\sum \left(\frac{\alpha}{\beta} + \frac{\beta}{\alpha} \right).$$



Watch Video Solution

7. Let $r, s,$ and t be the roots of equation $8x^2 + 1001x + 2008 = 0$. Then

find the value of .



Watch Video Solution

8. The polynomial $f(x) = x^4 + ax^3 + bx^3 + cx + d$ has real coefficients and $f(2i) = f(2 + i) = 0$. Find the value of $(a + b + c + d)$.



Watch Video Solution

CONCEPT APPLICATION EXERCISE 2.12

1. If $f(x) = \sqrt{x^2 + ax + 4}$ is defined for all x , then find the values of a .

 [Watch Video Solution](#)

2. If $ax^2 + bx + c = 0$, $a, b, c \in \mathbb{R}$ has no real roots, and if $c < 0$, the which of the following is true ? (a) $a < 0$ (b) $a + b + c > 0$ (c) $a + b + c < 0$

 [Watch Video Solution](#)

3. If $ax^2 + bx + c = 0$ has imaginary roots and $a+b+c$

 [Watch Video Solution](#)

4. Let $x, y, z \in \mathbb{R}$ such that $x^2 + y^2 + z^2 = 6$ and $xy + yz + zx = 7$. Then find the range of values of $x, y, and z$.



[Watch Video Solution](#)

5. If x is real and $(x^2 + 2x + c) / (x^2 + 4x + 3c)$ can take all real values, of then show that $0 \leq c \leq 1$.



[Watch Video Solution](#)

6. Prove that for all real values of x and y , $x^2 + 2xy + 3y^2 - 6x - 2y \geq -11$.



[Watch Video Solution](#)

7. Find the complete set of values of a such that $(x^2 - x) / (1 - ax)$ attains all real values.



[Watch Video Solution](#)

8. If the quadratic equation $ax^2 + bx + 6 = 0$ does not have real roots and $b \in \mathbb{R}^+$, then prove that $a > \max\left\{\frac{b^2}{24}, b - 6\right\}$

 [Watch Video Solution](#)

9. If x is real and the roots of the equation $ax^2 + bx + c = 0$ are imaginary, then prove that $a^2x^2 + abx + ac$ is always positive.

 [Watch Video Solution](#)

10. Let a, b, c be real. If $ax^2 + bx + c = 0$ has two real roots α and β , where $\alpha < -1$ and $\beta > 1$, then show that $1 + \frac{c}{a} + \left|\frac{b}{a}\right| < 0$

 [Watch Video Solution](#)

11. If $x^2 + (a - b)x + (1 - a - b) = 0$, where $a, b \in \mathbb{R}$, then find the values of a for which equation has unequal real roots for all values of b .

 [Watch Video Solution](#)

CONCEPT APPLICATION EXERCISE 2.13

1. Find the values of a if $x^2 - 2(a - 1)x + (2a + 1) = 0$ has positive roots.

 [Watch Video Solution](#)

2. If the equation $(a - 5)x^2 + 2(a - 10)x + a + 10 = 0$ has roots of opposite sign, then find the values of a .

 [Watch Video Solution](#)

3. If both the roots of $x^2 - ax + a = 0$ are greater than 2, then find the value of a .

 [Watch Video Solution](#)

4. If both the roots of $ax^2 + ax + 1 = 0$ are less than 1, then find the exhaustive range of values of a .

 [Watch Video Solution](#)

5. If both the roots of $x^2 + ax + 2 = 0$ lies in the interval $(0, 3)$, then find the exhaustive range of value of a .

 [Watch Video Solution](#)

6. If α, β are the roots of $x^2 - 3x + a = 0$, $a \in R$ and $-1 < \alpha < \beta$, then find the values of a

 [Watch Video Solution](#)

7. If α is the root (having the least absolute value) of the equation $x^2 - bx - 1 = 0 (b \in R^+)$, then prove that $-1 < \alpha < 0$.



[Watch Video Solution](#)

8. If $a < b < c < d$, then for any real non-zero λ , the quadratic equation $(x - a)(x - c) + \lambda(x - b)(x - d) = 0$, has real roots for



[Watch Video Solution](#)

9. Find the values of a for which the equation $\sin^4 x + a \sin^2 x + 1 = 0$ will have ea solution.



[Watch Video Solution](#)

Single Correct Answer Type : Exercise

1. The value of expression $x^4 - 8x^3 + 18x^2 - 8x + 2$ when $x = 2 + \sqrt{3}$

A. 2

B. 1

C. 0

D. 3

Answer: B



Watch Video Solution

2. If $x = 1 + \frac{1}{3 + \frac{1}{3 + \frac{1}{2 \dots \infty}}}$ then the value of x is

A. $\sqrt{\frac{5}{2}}$

B. $\sqrt{\frac{3}{2}}$

C. $\sqrt{\frac{7}{3}}$

D. $\sqrt{\frac{5}{3}}$

Answer: 4



Watch Video Solution

3. The sum of the non-real root of $(x^2 + x - 2)(x^2 + x - 3) = 12$ is -1

b. 1 c. -6 d. 6

A. -1

B. 1

C. -6

D. 6

Answer: 1



Watch Video Solution

4. The number of irrational roots of the equation

$$\frac{4x}{x^2 + x + 3} + \frac{5x}{x^2 - 5x + 3} = -\frac{3}{2} \text{ is}$$

A. 4

B. 0

C. 1

D. 2

Answer: 4



Watch Video Solution

5. The curve $y = (\lambda + 1)x^2 + 2$ intersects the curve $y = \lambda x + 3$ in exactly one point, if λ equals { - 2, 2} b. {1} c. { - 2} d. {2}

A. { - 2, 2}

B. {1}

C. { - 2}

D. {2}

Answer: 3



Watch Video Solution

6. If the expression $x^2 + 2(a + b + c)x + 3(bc + ca + ab)$ is a perfect square then

A. $a = b = c$

B. $a = \pm b = \pm c$

C. $a = b \neq c$

D. none of these

Answer: 1



Watch Video Solution

7. If $(ax^2 + c)y + (ax^2 + c) = 0$ and x is a rational function of y and a is negative, then $ac' + c'a = 0$ b. $a/a' = c/c'$ c. $a^2 + c^2 = a'^2 + c'^2$ d.

$aa' + a'^2 = 1$

A. $ac' + a'c = 0$

B. $a/a' = c/c'$

C. $a^2 + c^2 = a'^2 + c'^2$

D. $aa' + ' = 1$

Answer: 2



Watch Video Solution

8. If a, b, c are three distinct positive real numbers, the number of real and distinct roots of $ax^2 + 2b|x| - c = 0$ is 0 b. 4 c. 2 d. none of these

A. 0

B. 4

C. 2

D. none of these

Answer: 3



Watch Video Solution

9. Let a, b and c be real numbers such that $4a + 2b + c = 0$ and $ab > 0$.

Then the equation $ax^2 + bx + c = 0$ has

- A. complex roots
- B. exactly one root
- C. real roots
- D. none of these

Answer: 3



Watch Video Solution

10. If $a \in (-1, 1)$, then roots of the quadratic equation $(a - 1)x^2 + ax + \sqrt{1 - a^2} = 0$ are a. real b. imaginary c. both equal d. none of these

- A. real
- B. imaginary

C. both equal

D. none of these

Answer: 1



Watch Video Solution

11. The integral value of m for which the root of the equation $mx^2 + (2m - 1)x + (m - 2) = 0$ are rational are given by the expression [where n is integer] n^2 b. $n(n + 2)$ c. $n(n + 1)$ d. none of these

A. n^2

B. $n(n + 2)$

C. $n(n + 1)$

D. none of these

Answer: 3



Watch Video Solution

12. $x^2 - xy + y^2 - 4x - 4y + 16 = 0$ represents a. a point b. a circle c. a pair of straight line d. none of these

A. a point

B. a circle

C. a pair of straight lines

D. none of these

Answer: 1



Watch Video Solution

13. If the roots of the equation $x^2 + 2ax + b = 0$ are real and distinct and they differ by at most $2m$, then b lies in the interval $(a^2 - m^2, a^2 + m^2)$

b. $(a^2 - m^2, a^2 + m^2)$ c. $[a^2 - m^2, a^2 + m^2]$ d. none of these

A. $(a^2, a^2 + m^2)$

B. $(a^2 - m^2, a^2)$

C. $[a^2 - m^2, a^2)$

D. none of these

Answer: 3



Watch Video Solution

14. If x is real, then $x / (x^2 - 5x + 9)$ lies between -1 and $-1/11$ b.
 1 and $-1/11$ c. 1 and $1/11$ d. none of these

A. -1 and $-1/11$

B. 1 and $-1/11$

C. 1 and $1/11$

D. none of these

Answer: 2



Watch Video Solution

15. If $x^2 + ax - 3x - (a + 2) = 0$ has real and distinct roots, then the minimum value of $(a^2 + 1) / (a^2 + 2)$ is 1 b. 0 c. $\frac{1}{2}$ d. $\frac{1}{4}$

A. 1

B. 0

C. $\frac{1}{2}$

D. $\frac{1}{4}$

Answer: C



Watch Video Solution

16. If $a, b, c, d \in R$, then the equation $(x^2 + ax - 3b)(x^2 - cx + b)(x^2 - dx + 2b) = 0$ has a. 6 real roots b. at least 2 real roots c. 4 real roots d. none of these

A. 6 real roots

B. at least 2 real roots

C. 4 real roots

D. 3 real roots

Answer: 2



Watch Video Solution

17. (B) (2, 9/4) If two roots of the equation $(a - 1)(x^2 + x + 1)^2 - (a + 1)(x^4 + x^2 + 1) = 0$ are real and distinct, then a lies in the interval

A. $(-\infty, 3]$

B. $(-\infty, -2) \cup (2, \infty)$

C. $[-2, 2]$

D. $[-3, \infty)$

Answer: 2



[Watch Video Solution](#)

18. If $b_1b_2 = 2(c_1 + c_2)$, then at least one of the equations $x^2 + b_1x + c_1 = 0$ and $x^2 + b_2x + c_2 = 0$ has

A. imaginary roots

B. real roots

C. purely imaginary roots

D. none of these

Answer: 2



[Watch Video Solution](#)

19. Suppose A , B , C are defined as $A = a^2b + ab^2 - a^2c - ac^2$, $B = b^2c + bc^2 - a^2b - ab^2$, and $C = a^2c + ac^2 - b^2c - bc^2$, where $a > b > c > 0$ and the equation $Ax^2 + Bx + C = 0$ has equal roots, then a, b, c are in

A. A.P.

B. G.P.

C. H.P.

D. A.G.P.

Answer: 3



Watch Video Solution

20. If α, β are the roots of $x^2 - px + q = 0$ and α', β' are the roots of $x^2 - p'x + q' = 0$, then the value of $(\alpha - \alpha')^2 + (\beta + \alpha')^2 + (\alpha - \beta')^2 + (\beta - \beta')^2$ is

A. $2\{p^2 - 2q + p'^2 - 2q' - pp'\}$

B. $2\{p^2 - 2q + p'^2 - 2q' - qq'\}$

C. $2\{p^2 - 2q - p'^2 - 2q' + pp'\}$

D. $2\{p^2 - 2q - p'^2 - 2q' - qq'\}$

Answer: 1



Watch Video Solution

21. If α, β are the roots of the equation $ax^2 + bx + c = 0$, then the value of $\frac{a\alpha^2 + c}{a\alpha + b} + \frac{a\beta^2 + c}{a\beta + b}$ is a. $\frac{b(b^2 - 2ac)}{4a}$ b. $\frac{b^2 - 4ac}{2a}$ c. $\frac{b(b^2 - 2ac)}{a^2c}$ d. none of these

A. $\frac{b(b^2 - 2ac)}{4a}$

B. $\frac{b^2 - 4ac}{2a}$

C. $\frac{b(b^2 - 2ac)}{a^2c}$

D. none of these

Answer: C



Watch Video Solution

22. The quadratic $x^2 + ax = b + 1 = 0$ has roots which are positive integers, then $(a^2 + b^2)$ can be equal to 50 b. 37 c. 61 d. 19

A. 50

B. 37

C. 61

D. 19

Answer: 1



Watch Video Solution

23. If α, β re the roots of $ax^2 + c = bx$, then the equation $(a + cy)^2 = b^2y$ in y has the roots $\alpha\beta^{-1}, \alpha^{-1}\beta$ b. α^{-2}, β^{-2} c. α^{-1}, β^{-1} d. α^2, β^2

A. $\alpha\beta^{-1}, \alpha^{-1}\beta$

B. α^{-2}, β^{-2}

C. α^{-1}, β^{-1}

D. α^2, β^2

Answer: 2



Watch Video Solution

24. If α and β are roots of the equation $ax^2 + bx + c = 0$, then the roots of the equation $a(2x + 1)^2 - b(2x + 1)(3 - x) + c(3 - x)^2 = 0$ are $\frac{2\alpha + 1}{\alpha - 3}, \frac{2\beta + 1}{\beta - 3}$ b. $\frac{3\alpha + 1}{\alpha - 2}, \frac{3\beta + 1}{\beta - 2}$ c. $\frac{2\alpha - 1}{\alpha - 2}, \frac{2\beta + 1}{\beta - 2}$ d. none of these

A. $\frac{2\alpha + 1}{\alpha - 3}, \frac{2\beta + 1}{\beta - 3}$

B. $\frac{3\alpha + 1}{\alpha - 2}, \frac{2\beta + 1}{\beta - 2}$

C. $\frac{2\alpha - 1}{\alpha - 2}, \frac{2\beta + 1}{\beta - 2}$

D. none of these

Answer: 2



[Watch Video Solution](#)

25. If the roots of the equation $ax^2 - bx + c = 0$ are α, β , then the roots of the equation $b^2cx^2 - ab^2x + a^3 = 0$ are $\frac{1}{\alpha^3 + \alpha\beta}, \frac{1}{\beta^3 + \alpha\beta}$ b. $\frac{1}{\alpha^2 + \alpha\beta}, \frac{1}{\beta^2 + \alpha\beta}$ c. $\frac{1}{\alpha^4 + \alpha\beta}, \frac{1}{\beta^4 + \alpha\beta}$ d. none of these

A. $\frac{1}{\alpha^3 + \alpha\beta}, \frac{1}{\beta^3 + \alpha\beta}$

B. $\frac{1}{\alpha^2 + \alpha\beta}, \frac{1}{\beta^2 + \alpha\beta}$

C. $\frac{1}{\alpha^4 + \alpha\beta}, \frac{1}{\beta^4 + \alpha\beta}$

D. none of these

Answer: 2

[Watch Video Solution](#)

26. If $a(p + q)^2 + 2bpq + c = 0$ and $a(p + r)^2 + 2bpr + c = 0$ ($a \neq 0$), then which one is correct? a) $qr = p^2$ b) $qr = p^2 + \frac{c}{a}$ c) none of these d) either a) or b)

A. $qr = p^2$

B. $qr = p^2 + \frac{c}{a}$

C. $qr = -p^2$

D. none of these

Answer: 2



Watch Video Solution

27. If α, β are the nonzero roots of $ax^2 + bx + c = 0$ and α^2, β^2 are the roots of $a^2x^2 + b^2x + c^2 = 0$, then a, b, c are in a. G.P. b. H.P. c.

A.P. d. none of these

A. G.P.

B. H.P.

C. A.P.

D. none of these

Answer: 1



Watch Video Solution

28. If the roots of the equation $ax^2 + bx + c = 0$ are of the form $(k + 1)/k$ and $(k + 2)/(k + 1)$, then $(a + b + c)^2$ is equal to $2b^2 - ac$ b. a^2 c. $b^2 - 4ac$ d. $b^2 - 2ac$

A. $2b^2 - ac$

B. a^2

C. $b^2 - 4ac$

D. $b^2 - 2ac$

Answer: 3



Watch Video Solution

29. If α, β are the roots of $ax^2 + bx + c = 0$ and $\alpha + h, \beta + h$ are the roots of $px^2 + qx + r = 0$, then $h =$

A. $-\frac{1}{2} \left(\frac{a}{b} - \frac{p}{q} \right)$

B. $\left(\frac{b}{a} - \frac{q}{p} \right)$

C. $\frac{1}{2} \left(\frac{b}{a} - \frac{q}{p} \right)$

D. none of these

Answer: C



Watch Video Solution

30. If one root of $x^2 - x - k = 0$ is square of the other, then find the value of k .

A. $2 \pm \sqrt{5}$

B. $2 \pm \sqrt{3}$

C. $3 \pm \sqrt{2}$

D. $5 \pm \sqrt{2}$

Answer: 1



Watch Video Solution

31. If α and β be the roots of the equation $x^2 + px - 1/(2p^2) = 0$,

where $p \in R$. Then the minimum value of $\alpha^4 + \beta^4$ is

A. $2\sqrt{2}$

B. $2 - \sqrt{2}$

C. 2

D. $2 + \sqrt{2}$

Answer: 4



Watch Video Solution

32. If α, β are the roots of $x^2 + px + q = 0$ and γ, δ are the roots of $x^2 + px + r = 0$, then $\frac{(\alpha - \gamma)(\alpha - \delta)}{(\beta - \gamma)(\beta - \delta)} =$

(a) 1 (b) q (c) r (d) $q + r$

A. 1

B. q

C. r

D. $q + r$

Answer: 1



Watch Video Solution

33. The value of m for which one of the roots of $x^2 - 3x + 2m = 0$ is double of one of the roots of $x^2 - x + m = 0$ is

A. -2

B. 1

C. 2

D. none of these

Answer: A



Watch Video Solution

34. If the equation $x^2 - 3px + 2q = 0$ and $x^2 - 3ax + 2b = 0$ have a common roots and the other roots of the second equation is the reciprocal of the other roots of the first, then $(2 - 2b)^2 \cdot 36pa(q - b)^2$ b. $18pa(q - b)^2$ c. $36bq(p - a)^2$ d. $18bq(p - a)^2$

A. $36pa(q - b)^2$

B. $18pa(q - b)^2$

C. $36bq(p - a)^2$

D. $18bq(p - a)^2$

Answer: 3



Watch Video Solution

35. If α, β are the roots of the equation $x^2 - 2x + 3 = 0$ obtain the equation whose roots are $\alpha^3 - 3\alpha^2 + 5\alpha - 2$ and $\beta^3 - \beta^2 + \beta + 5$

A. $x^2 - 3x + 2 = 0$

B. $x^2 - 3x - 2 = 0$

C. $x^2 - 3x + 2 = 0$

D. none of these

Answer: 3



Watch Video Solution

36. A quadratic equation with integral coefficients has two different prime numbers as its roots. If the sum of the coefficients of the equation is prime, then the sum of the roots is a. 2 b. 5 c. 7 d. 11

A. 2

B. 5

C. 7

D. 11

Answer: 2



Watch Video Solution

37. One of the roots of $ax^2 + bx + c = 0$ is greater than 2 and the other is less than -1. If the roots of $cx^2 + bx + a = 0$ are α and β , then

A. $0 < \alpha < \frac{1}{2}$ and $-1 < \beta < 0$

B. $\alpha < \frac{1}{2}$ and $\beta < -1$

C. $\alpha > \frac{1}{2}$ and $\beta > -1$

D. $\alpha < 2$ and $\beta > -1$

Answer: 1



Watch Video Solution

38. The quadratic equations $x^2 - 6x + a = 0$ and $x^2 - cx + 6 = 0$ have one root in common. The other roots of the first and second equations are integers in the ratio 4 : 3. Then the common root is

- A. both roots more than α
- B. both roots less than α
- C. one root more than α and other less than α
- D. Can't say anything

Answer: 3



[Watch Video Solution](#)

39. If α and β , α and γ , α and δ are the roots of the equations $ax^2 + 2bx + c = 0$, $2bx^2 + cx + a = 0$ and $cx^2 + ax + 2b = 0$ respectively where a, b, c are positive real numbers, then $\alpha + \alpha^2$ is equal to

A. abc

B. $a + 2b + c$

C. -1

D. 0

Answer: 3



Watch Video Solution

40. If the equations $ax^2 + bx + c = 0$ and $x^3 + 3x^2 + 3x + 2 = 0$ have two common roots, then a. $a = b = c$ b. $a = b \neq c$ c. $a = -b = c$ d. none of these.

A. $a = b = c$

B. $a = b \neq c$

C. $a = -b = c$

D. none of these

Answer: 1



Watch Video Solution

41. The number of values of a for which equations $x^3 + ax + 1 = 0$ and $x^4 + ax^2 + 1 = 0$ have a common root is a) 0 b) 1 c) 2 d) Infinite

A. 0

B. 1

C. 2

D. infinite

Answer: B



Watch Video Solution

42. The number of value of k for which $[x^2 - (k - 2)x + k^2] \times [x^2 + kx + (2k - 1)]$ is a perfect square is 2 b.
1 c. 0 d. none of these

A. 2

B. 1

C. 0

D. none of these

Answer: 2



Watch Video Solution

43. The sum of the values of x satisfying the equation $(31 + 8\sqrt{15})^{x^2-3} + 1 = (32 + 8\sqrt{15})^{x^2-3}$ is

A. 3

B. 0

C. 2

D. none of these

Answer: 2



Watch Video Solution

44. The equation $(x^2 + x + 1)^2 + 1 = (x^2 + x + 1)(x^2 - x - 5)$ for $x \in (-2, 3)$ will have number of solutions. 1 b. 2 c. 3 d. 0

A. 1

B. 2

C. 3

D. zero

Answer: 4



Watch Video Solution

45. If α, β are the roots of

$$x^2 + px + q = 0 \text{ and } x^{2n} + p^n x^n + q^n = 0 \text{ and if } (\alpha/\beta), (\beta/\alpha) \text{ are the}$$

roots of $x^n + 1 + (x + 1)^n = 0$, then $n \in \mathbb{N}$ a. must be an odd integer

b. may be any integer c. must be an even integer d. cannot say anything

A. must be an odd integer

B. may be any integer

C. must be an even integer

D. cannot say anything

Answer: 3



Watch Video Solution

46. If $P(x)$ is a polynomial with integer coefficients such that for 4 distinct integers a, b, c, d , $P(a) = P(b) = P(c) = P(d) = 3$, if $P(e) = 5$, (e is an integer) then 1. $e=1$, 2. $e=3$, 3. $e=4$, 4. No integer value of e

A. $e = 1$

B. $e = 3$

C. $e = 4$

D. no real value of e

Answer: 4



Watch Video Solution

47. Let $f(x) = x^2 + bx + c$, where $b, c \in R$. If $f(x)$ is a factor of both $x^4 + 6x^2 + 25$ and $3x^4 + 4x^2 + 28x + 5$, then the least value of $f(x)$ is
2 b. 3 c. $5/2$ d. 4

A. 2

B. 3

C. $5/2$

D. 4

Answer: 4



Watch Video Solution

48. Consider the equation

$x^2 + 2x - n = 0$ where $n \in \mathbb{N}$ and $n \in [5, 100]$. The total number of

different values of n so that the given equation has integral roots is 8 b. 3

c. 6 d. 4

A. 8

B. 3

C. 6

D. 4

Answer: 1



Watch Video Solution

49. The total number of integral values of a so that

$x^2 - (a + 1)x + a - 1 = 0$ has integral roots is equal to a. 1 b. 2 c. 4 d.

none of these

A. 1

B. 2

C. 4

D. none of these

Answer: 1



Watch Video Solution

50. The number of integral values of a for which the quadratic equation

$(x + a)(x + 1991) + 1 = 0$ has integral roots are a. 3 b. 0 c. 1 d. 2

A. 3

B. 0

C. 1

D. 2

Answer: 4



Watch Video Solution

51. The number of real solutions of the equation

$(9/10)^x = -3 + x - x^2$ is a. 2 b. 0 c. 1 d. none of these

A. 2

B. 0

C. 1

D. none of these

Answer: 2



Watch Video Solution

52. The number of real solutions of $|x| + 2\sqrt{5 - 4x - x^2} = 16$ is/are a. 6

b. 1 c. 0 d. 4

A. 6

B. 1

C. 0

D. 4

Answer: 3



Watch Video Solution

53. Let $p(x) = 0$ be a polynomial equation of the least possible degree, with rational coefficients having $\sqrt[3]{7} + \sqrt[3]{49}$ as one of its roots. Then product of all the roots of $p(x) = 0$ is

a. 56 b. 63 c. 7 d. 49

A. 56

B. 63

C. 7

D. 49

Answer: 1



Watch Video Solution

54. If $\alpha, \beta, \gamma, \sigma$ are the roots of the equation $x^4 + 4x^3 - 6x^2 + 7x - 9 = 0$, then the value of $(1 + \alpha^2)(1 + \beta^2)(1 + \gamma^2)(1 + \sigma^2)$ is a. 9 b. 11 c. 13 d. 5

A. 9

B. 11

C. 13

D. 5

Answer: 3



Watch Video Solution

55. If $(m_r, \frac{1}{m_r})$ where $r=1,2,3,4$, are four pairs of values of x and y that satisfy the equation $x^2 + y^2 + 2gx + 2fy + c = 0$, then the value of $m_1 \cdot m_2 \cdot m_3 \cdot m_4$ is a. 0 b. 1 c. -1 d. none of these

A. 0

B. 1

C. -1

D. none of these

Answer: 2



Watch Video Solution

56. If roots of an equation $x^n - 1 = 0$ are $1, a_1, a_2, \dots, a_{n-1}$, then the value of $(1 - a_1)(1 - a_2)(1 - a_3)\dots(1 - a_{n-1})$ will be a. n b. n^2 c. n^n d. 0

A. n

B. n^2

C. n^n

D. 0

Answer: 1



Watch Video Solution

57. If $\tan \theta_1, \tan \theta_2, \tan \theta_3$ are the real roots of the equation $x^2 - (a + 1)x^2 + 1)(b - a)x - b = 0$, where $\theta_1 + \theta_2 + \theta_3 \in (0, \pi)$, then $\theta_1 + \theta_2 + \theta_3$, is equal to $\pi/2$ b. $\pi/4$ c. $3\pi/4$ d. π

A. $\pi/2$

B. $\pi/4$

C. $3\pi/4$

D. π

Answer: 2



Watch Video Solution

58. If α, β, γ are the roots of $x^3 - x^2 - 1 = 0$ then the value of

$\frac{1 + \alpha}{1 - \alpha} + \frac{1 + \beta}{1 - \beta} + \frac{1 + \gamma}{1 - \gamma}$ is equal to

(a) -5 b. -6 c. -7 d. -2

A. -5

B. -6

C. -7

D. -2

Answer: A



Watch Video Solution

59. If $\alpha, \beta, \gamma, \delta$ are the roots of the equation

$x^4 - Kx^3 + Lx^2 + Mx + m = 0$, where K, L , and M are real numbers,

then the minimum value of $\alpha^2 + \beta^2 + \gamma^2 + \delta^2$ is 0 b. -1 c. 1 d. 2

A. 0

B. -1

C. 1

D. 2

Answer: 2



Watch Video Solution

60. Set of all real value of a such that

$f(x) = \frac{(2a - 1)x^2 + 2(a + 1)x + (2a - 1)}{x^2 - 2x + 40}$ is always negative is a.

($-\infty, 0$) b. ($0, \infty$) c. ($-\infty, \frac{1}{2}$) d. none

A. ($-\infty, 0$)

B. ($0, \infty$)

C. ($-\infty, 1/2$)

D. None

Answer: 1



[Watch Video Solution](#)

61. If $a, b \in R, a \neq 0$ and the quadratic equation $ax^2 - bx + 1 = 0$ has imaginary roots, then $(a + b + 1)$ is a. positive b. negative c. zero d.

Dependent on the sign of b

A. positive

B. negative

C. zero

D. dependent on the sign of b

Answer: 1



[Watch Video Solution](#)

62. If the expression $[mx - 1 + (1/x)]$ is non-negative for all positive real x , then the minimum value of m must be $-1/2$ b. 0 c. $1/4$ d. $1/2$

A. $-1/2$

B. 0

C. $1/4$

D. $1/2$

Answer: 3



Watch Video Solution

63. Suppose that $f(x)$ is a quadratic expression positive for all real x . If

$g(x) = f(x) + f'(x) + f''(x)$, then for any real

x (where $f'(x)$ and $f''(x)$ represent 1st and 2nd derivative, respectively).

a. $g(x) < 0$ b. $g(x) > 0$ c. $g(x) = 0$ d. $g(x) \geq 0$

A. $g(x) < 0$

B. $g(x) > 0$

C. $g(x) = 0$

D. $g(x) \geq 0$

Answer: 2



Watch Video Solution

64. Let $a, b, c \in R$ with $a > 0$ such that the equation $ax^2 + bcx + b^3 + c^3 - 4abc = 0$ has non-real roots.

If $P(x) = ax^2 + bx + c$ and $Q(x) = ax^2 + cx + b$, then (a) $P(x) > 0$ for all $x \in R$ and $Q(x) < 0$ for all $x \in R$. (b) $P(x) < 0$ for all $x \in R$ and $Q(x) > 0$ for all $x \in R$. (c) neither $P(x) > 0$ for all $x \in R$ nor $Q(x) > 0$ for all $x \in R$. (d) exactly one of $P(x)$ or $Q(x)$ is positive for all real x .

A. $P(x) > 0$ for all $x \in R$ and $Q(x) < 0$ for all $x \in R$.

B. $P(x) < 0$ for all $x \in R$ and $Q(x) > 0$ for all $x \in R$.

C. neither $P(x) > 0$ for all $x \in R$ nor $Q(x) > 0$ for all $x \in R$.

D. exactly one of $P(x)$ or $Q(x)$ is positive for all real x .

Answer: 4





Watch Video Solution

65. Let $f(x) = ax^2 - bx + c^2$, $b \neq 0$ and $f(x) \neq 0$ for all $x \in R$. Then

A. $a + c^2 < b$

B. $4a + c^2 > 2b$

C. $9a - 3b + c^2 < 0$

D. none of these

Answer: 2



Watch Video Solution

66. Let $f(x) = ax^2 + bx + ca$, $a, b, c \in R$. If $f(x)$ takes real values for real values of x and non-real values for non-real values of x , then (a) $a = 0$ (b) $b = 0$ (c) $c = 0$ (d) nothing can be said about a, b, c .

A. $a = 0$

B. $b = 0$

C. $c = 0$

D. nothing can be said about a, b, c.

Answer: 1



Watch Video Solution

67. If both roots of the equation $ax^2 + x + c - a = 0$ are imaginary and $c > -1$, then

A. $3a > 2 + 4c$

B. $3a < 2 + 4c$

C. $c < a$

D. none of these

Answer: 2



Watch Video Solution

68. If $(b^2 - 4ac)^2(1 + 4a^2) < 64a^2, a < 0$, then maximum value of quadratic expression $ax^2 + bx + c$ is always less than a. 0 b. 2 c. -1 d. -2

A. 0

B. 2

C. -1

D. -2

Answer: 2



Watch Video Solution

69. If the equation $|x^2 + bx + c| = k$ has four real roots, then $b^2 - 4c$

> 0 and $0 < k < \frac{4c - b^2}{4}$ none of these

A. $b^2 - 4c > 0$ and $0 < k < \frac{4c - b^2}{4}$

B. $b^2 - 4c < 0$ and $0 < k < \frac{4c - b^2}{4}$

C. $b^2 - 4c > 0$ and $-k > \frac{4c - b^2}{4}$

D. none of these

Answer: 1



Watch Video Solution

70. The set of value of a for which $(a - 1)x^2(a + 1)x + a - 1 \geq 0$ is true for all $x \geq 2$ is (a) $(-\infty, 1)$ b. $(1, \frac{7}{3})$ c. $(\frac{7}{3}, \infty)$ d. none of these

A. $(-\infty, 1)$

B. $(1, \frac{7}{3})$

C. $(\frac{7}{3}, \infty)$

D. none of these

Answer: 3



Watch Video Solution

71. If the equation $ax^2 + bx + c = x$ has no real roots, then the equation $a(ax^2 + bx + c)^2 + b(ax^2 + bx + c) + c = x$ will have

a. four real roots
 b. no real root
 c. at least two least roots
 d. none of these

A. four real roots

B. no real root

C. al least two real roots

D. None of these

Answer: 2



Watch Video Solution

72. If $ax^2 + bx + c = 0$ has imaginary roots and $a - b + c > 0$ then the set of points (x, y) satisfying the equation $\left| a\left(x^2 \frac{y}{a}\right) + (b + 1)x + c \right| = |ax^2 + bx + c| + |x + y|$ consists of the region in the xy -plane which is on or above the bisector of I and III quadrant on or above the bisector of II and IV quadrant on or below the

bisector of I and III quadrant on or below the bisector of II and IV quadrant

A. on or above the bisector of I and III quadrant

B. on or above the bisector of II and IV quadrant

C. on or below the bisector of I and III quadrant

D. on or below the bisector of II and IV quadrant .

Answer: 2

 [Watch Video Solution](#)

73. Given $x, y \in R, x^2 + y^2 > 0$. Then the range of $\frac{x^2 + y^2}{x^2 + xy + 4y^2}$ is (a)

$\left(\frac{10 - 4\sqrt{5}}{3}, \frac{10 + 4\sqrt{5}}{3}\right)$ (b) $\left(\frac{10 - 4\sqrt{5}}{15}, \frac{10 + 4\sqrt{5}}{15}\right)$ (c)

$\left(\frac{5 - 4\sqrt{5}}{15}, \frac{5 + 4\sqrt{5}}{15}\right)$ (d) $\left(\frac{20 - 4\sqrt{5}}{15}, \frac{20 + 4\sqrt{5}}{15}\right)$

A. $\left(\frac{10 - 4\sqrt{5}}{3}, \frac{10 + 4\sqrt{5}}{3}\right)$

B. $\left(\frac{10 - 4\sqrt{5}}{15}, \frac{10 + 4\sqrt{5}}{15}\right)$

C. $\left(\frac{5 - 4\sqrt{5}}{15} \cdot \frac{5 + 4\sqrt{5}}{15} \right)$

D. $\left(\frac{20 - 4\sqrt{5}}{15} \cdot \frac{20 + 4\sqrt{5}}{15} \right)$

Answer: 2



Watch Video Solution

74. x_1 and x_2 are the roots of $ax^2 + bx + c = 0$ and $x_1x_2 < 0$. Roots of $x_1(x - x_2)^2 + x_2(x - x_1)^2 = 0$ are: (a) real and of opposite sign b. negative c. positive d. none real

A. real and opposite sign

B. negative

C. positive

D. nonreal

Answer: 1



Watch Video Solution

75. If a, b, c, d are four consecutive terms of an increasing A.P., then the roots of the equation $(x - a)(x - c) + 2(x - b)(x - d) = 0$ are

a. non-real complex

b. real and equal

c. integers

d. real and distinct

A. non-real complex

B. real and equal

C. integers

D. real and distinct

Answer: 4



Watch Video Solution

76. If roots of $x^2 - (a - 3)x + a = 0$ are such that at least one of them is greater than 2, then a. $a \in [7, 9]$ b. $a \in [7, \infty)$ c. $a \in [9, \infty)$ d. $a \in [7, 9]$

A. $a \in [7, 9]$

B. $a \in [7, \infty)$

C. $a \in [9, \infty)$

D. $a \in [7, 9)$

Answer: 3



Watch Video Solution

77. All the values of m for which both roots of the equation $x^2 - 2mx + m^2 - 1 = 0$ are greater than -2 but less than 4 lie in the interval

A. $-2 < m < 0$

B. $m > 3$

C. $-1 < m < 3$

D. $1 < m < 4$

Answer: 3



Watch Video Solution

78. if the roots of the quadratic equation $(4p - p^2 - 5)x^2 - 2mx + m^2 - 1 = 0$ are greater than -2 less than 4 lie in the interval

A. 1

B. 2

C. 3

D. 4

Answer: 2



Watch Video Solution

79. The interval of a for which the equation $\tan^2 x - (a - 4)\tan x + 4 - 2a = 0$ has at least one solution

$$\forall x \in [0, \pi/4]$$

a) $a \in (2, 3)$

b. $a \in [2, 3]$

c. $a \in (1, 4)$

d. $a \in [1, 4]$

A. $a \in (2, 3)$

B. $a \in [2, 3]$

C. $a \in (1, 4)$

D. $a \in [1, 4]$

Answer: 2



Watch Video Solution

80. The range of a for which the equation $x^2 + x - 4 = 0$ has its smaller root in the interval $(-1, 2)$ is $(-\infty, -3)$ b. $(0, 3)$ c. $(0, \infty)$ d. $(-\infty, -3) \cup (0, \infty)$

A. $(-\infty, -3)$

B. $(0, 3)$

C. $(0, \infty)$

D. $(-\infty, -3) \cup (0, \infty)$

Answer: A



Watch Video Solution

81. Find the set of all possible real value of a such that the inequality $(x - (a - 1))(x - (a^2 + 2)) < 0$ holds for all $x \in (-1, 3)$.

A. $(0, 1)$

B. $(\infty, -2]$

C. $(-\infty, -1)$

D. $(1, \infty)$

Answer: 2



Watch Video Solution

82. If the equation $\cos^4 x - 2 \cos^2 x + a^2 = 0$ has at least one solution, then the sum of all possible integral values of a is equal to a. 4 b. 3 c. 2 d.

0

A. 4

B. 3

C. 2

D. 0

Answer: 4



Watch Video Solution

83. If a, b, c are distinct positive numbers, then the nature of roots of the equation $1/(x - a) + 1/(x - b) + 1/(x - c) = 1/x$ is all real and is distinct all real and at least two are distinct at least two real d. all non-real

- A. all real and distinct
- B. all real and at least two are distinct
- C. at least two real
- D. all non-real

Answer: 1



[Watch Video Solution](#)

84. For $x^2 - (a + 3)|x| + 4 = 0$ to have real solutions, the range of a is

a. $(-\infty, -7] \cup [1, \infty)$ b. $(-3, \infty)$ c. $(-\infty, -7)$ d. $[1, \infty)$

A. $(-\infty, -7][1, \infty)$

B. $(-3, \infty)$

C. $(-\infty, -7]$

D. $[1, \infty)$

Answer: 4



Watch Video Solution

85. If the quadratic equation

$4x^2 - 2(a + c - 1)x + ac - b = 0$ ($a > b > c$) Both roots are greater

than a Both roots are less than c Both roots lie between $c/2$ and $a/2$

Exactly one of the roots lies between $c/2$ and $a/2$

A. both roots are greater than a

B. both roots are less than c

C. both roots lie between $c/2$ and $a/2$

D. exactly one of the roots lies between $c/2$ and $a/2$.

Answer: 4



Watch Video Solution

86. If the equation $x^2 + ax + b = 0$ has distinct real roots and $x^2 + a|x| + b = 0$ has only one real root, then

A. $b = 0, a > 0$

B. $b = 0, a < 0$

C. $b > 0, a < 0$

D. $b < 0, a > 0$

Answer: 1



Watch Video Solution

87. The equation $2^{2x} + (a - 1)2^{x+1} + a = 0$ has roots of opposite sign, then exhaustive set of values of a is

A. $a \in (-1, 0)$

B. $a < 0$

C. $a \in (-\infty, 1/3)$

D. $a \in (0, 1/3)$

Answer: 3



Watch Video Solution

88. All the values of 'a' for which the quadratic expression $ax^2 + (a - 2)x - 2$ is negative for exactly two integral values of x may lie in (a) $\left[1, \frac{3}{2}\right]$ (b) $\left[\frac{3}{2}, 2\right)$ (c) $[1, 2)$ (d) $[-1, 2)$

A. $(0,2)$

B. $[1,2)$

C. $(1, 2]$

D. $(0,2]$

Answer: 2



Watch Video Solution

89. If a_0, a_1, a_2, a_3 are all the positive, then

$4a_0x^3 + 3a_1x^2 + 2a_2x + a_3 = 0$ has least one root in $(-1, 0)$ if

A. $a_0 + a_2 = a_1 + a_3$ and $4a_0 + 2a_2 > 3a_1 + a_3$

B. $4a_0 + 2a_2 < 3a_1 + a_3$

C. $4a_0 + 2a_2 = 3a_1 + a_3$ and $a_0 + a_2 < a_1 + a_3$

D. none of these

Answer: 1



Watch Video Solution

Multiple Correct Answer Type

1. If $c \neq 0$ and the equation $\frac{p}{2x} = \frac{a}{x+c} + \frac{b}{x-c}$ has two equal roots, then p can be

A. $(\sqrt{a} - \sqrt{b})^2$

B. $(\sqrt{a} + \sqrt{b})^2$

C. $a + b$

D. $a - b$

Answer: 1.2



Watch Video Solution

2. If α, β are the roots of the quadratic equation $ax^2 + bx + c = 0$, then which of the following expression will be the symmetric function of roots

a. $\left| \log\left(\frac{\alpha}{\beta}\right) \right|$ b. $\alpha^2\beta^5 + \beta^2\alpha^5$ c. $\tan(\alpha - \beta)$ d. $\left(\log\left(\frac{1}{\alpha}\right)\right)^2 + (\log\beta)^2$

A. $\left| \log\frac{\alpha}{\beta} \right|$

B. $\alpha^2\beta^5 + \beta^2\alpha^5$

C. $\tan(\alpha - \beta)$

D. $\left(\log \frac{1}{\alpha}\right)^2 + (\log \beta)^2$

Answer: 1,2,4



Watch Video Solution

3. If one root of the quadratic equation $px^2 + qx + r = 0 (p \neq 0)$ is a

surd $\frac{\sqrt{a}}{\sqrt{a} + \sqrt{a - b}}$ where $p, q, r; a, b$ are all rationals then the other

root is -

A. $\frac{\sqrt{a}}{\sqrt{a} - \sqrt{a - b}}$

B. $\frac{\sqrt{a} - \sqrt{a - b}}{\sqrt{b}}$

C. $a + \frac{\sqrt{a(a - b)}}{b}$

D. $\frac{a + \sqrt{a(a - b)}}{b}$

Answer: 1,4



Watch Video Solution

4. If a, b, c real in G.P., then the roots of the equation $ax^2 + bx + c = 0$ are in the ratio a. $\frac{1}{2}(-1 + i\sqrt{3})$ b. $\frac{1}{2}(1 - i\sqrt{3})$ c. $\frac{1}{2}(-1 - i\sqrt{3})$ d. $\frac{1}{2}(1 + i\sqrt{3})$

A. $\frac{1}{2}(-1 + i\sqrt{3})$

B. $\frac{1}{2}(1 - i\sqrt{3})$

C. $\frac{1}{2}(-1 - i\sqrt{3})$

D. $\frac{1}{2}(1 + i\sqrt{3})$

Answer: 1,3



Watch Video Solution

5. the roots of the equation $(a + \sqrt{b})^{x^2-15} + (a - \sqrt{b})^{x^2-15} = 2a$ where $a^2 - b = 1$ are

A. ± 4

B. ± 3

C. $\pm \sqrt{14}$

D. $\pm \sqrt{5}$

Answer: 1,3



Watch Video Solution

6. If the equations $x^2 + px + q = 0$ and $x^2 + p'x + q' = 0$ have a common root, then it must be equal to a. $\frac{p' - p'q}{q - q'}$ b. $\frac{q - q'}{p' - p}$ c. $\frac{p' - p}{q - q'}$

d. $\frac{pq' - p'q}{p - p'}$

A. $\frac{pq' - p'q}{q - q'}$

B. $\frac{q - q'}{p' - p}$

C. $\frac{p' - p}{q - q'}$

D. $\frac{pq' - p'q}{p - p'}$

Answer: 1,2



Watch Video Solution

7. If the quadratic equation $ax^2 + bx + c = 0$ ($a > 0$) has $\sec^2 \theta$ and $\cos^2 \theta$ as its roots, then which of the following must hold good? **a.** $b + c = 0$ **b.** $b^2 - 4ac \geq 0$ **c.** $c \geq 4a$ **d.** $4a + b \geq 0$

A. $b + c = 0$

B. $b^2 - 4ac \geq 0$

C. $c \geq 4a$

D. $4ab \geq 0$

Answer: 1,2,3



Watch Video Solution

8. Given that α, γ are roots of the equation $Ax^2 - 4x + 1 = 0$, and β, δ the roots of the equation of $Bx^2 - 6x + 1 = 0$, such that α, β, γ , and δ are in H.P., then **a.** $A = 3$ **b.** $A = 4$ **B = 2** **d.** $B = 8$

A. $A = 3$

B. $A = 4$

C. $B = 2$

D. $B = 8$

Answer: 1,4



Watch Video Solution

9. If $\cos^4 \theta + \alpha$ are the roots of the equation $x^2 + 2bx + b = 0$ and $\cos^2 \theta + \beta, \sin^2 \theta + \beta$ are the roots of the equation $x^2 + 4x + 2 = 0$, then values of b are 2 b. -1 c. -2 d. 2

A. 2

B. -1

C. -2

D. 1

Answer: 1,2



Watch Video Solution

10. If α, β are the roots of the equation $ax^2 + bx + c = 0$ then the roots of the equation $(a + b + c)x^2 - (b + 2c)x + c = 0$ are (a) c (b) $d - c$ (c) $2c$ (d) 0

A. c

B. $d - c$

C. $2c$

D. 0

Answer: 2,4



Watch Video Solution

11. If every pair of equations $x^2 + ax + bc = 0$, $x^2 + bx + ca = 0$ and $x^2 + cx + ab = 0$ has a common root then their sum is

A. the sum of the three common roots is $-(1/2)(a + b + c)$

B. the sum of the three common roots is $2(a + b + c)$

C. one of the values of the product of the three common roots is abc

D. the product of the three common roots is $a^2b^2c^2$

Answer: 1,3



Watch Video Solution

12. If the equation $4x^2 - x - 1 = 0$ and $3x^2 + (\lambda + \mu)x + \lambda - \mu = 0$ have a root common, then the irrational values of λ and μ are (a)

$\lambda = \frac{-3}{4}$ b. $\lambda = 0$ c. $\mu = \frac{3}{4}$ b. $\mu = 0$

A. $\lambda = \frac{-3}{4}$

B. $\lambda = 0$

C. $\mu = \frac{3}{4}$

D. $\mu = 0$

Answer: 1,4



Watch Video Solution

13. If $x^3 + 3x^2 - 9x + c$ is of the form $(x - \alpha)^2(x - \beta)$ then c is equal to

A. 27

B. -27

C. 5

D. -5

Answer: 2,3



Watch Video Solution

14. If the equation whose roots are the squares of the roots of the cubic

$x^3 - ax^2 + bx - 1 = 0$ is identical with the given cubic equation, then

(A) $a = 0, b = 3$ (B) $a = b = 0$ (C) $a = b = 3$ (D) $a, b,$ are roots of

$$x^2 + x + 2 = 0$$

A. $a = 0, b = 3$

B. $a = b = 0$

C. $a = b = 3$

D. a, b are roots of $x^2 + x + 2 = 0$

Answer: 2,3,4



Watch Video Solution

15. If $f(x)$ is a polynomial of degree 4 with rational coefficients

and touches x - axis at $(\sqrt{2}, 0)$, then for the equation

$$f(x) = 0,$$

 Watch Video Solution

16. $\left(x^3 + \frac{1}{x^3}\right) + \left(x^2 + \frac{1}{x^2}\right) - 6\left(x + \frac{1}{x}\right) - 7 = 0$

A. $\frac{3 + \sqrt{5}}{2}$

B. $\frac{-3 - \sqrt{5}}{2}$

C. $\frac{3 - \sqrt{5}}{2}$

D. $\frac{-3 + \sqrt{5}}{2}$

Answer: 1,2,3,4

 Watch Video Solution

17. $2x^2 + 6xy + 5y^2 = 1$, then

A. $|x| \leq \sqrt{5}$

B. $|x| \geq \sqrt{5}$

C. $y^2 \leq 2$

D. $y^2 \leq 4$

Answer: 1,3



Watch Video Solution

18. If $f(x) = ax^2 + bx + c$, where $a \neq 0, b, c \in \mathbf{R}$, then which of the following conditions implies that $f(x)$ has real roots?

A. $a + b + c = 0$

B. a and c are of opposite signs

C. $4ac - b^2 < 0$

D. a and b are of opposite signs

Answer: 1,2,3,



Watch Video Solution

19. If $\frac{x^2 + 5}{2} = x - 2 \cos(m + n)\pi$ has at least one real root, the

A. number of possible values of x is two

B. number of possible values of x is one

C. the value of $m + n$ is $(2n + 1)\pi$

D. the value of $m + n$ is $2n\pi$

Answer: 2,3,



Watch Video Solution

20. Let three quadratic equations

$$ax^2 - 2bx + c = 0, \quad bx^2 - 2cx + a = 0$$

and $cx^2 - 2ax + b = 0$, all have only positive roots. Then it is true that which of these are always true?

A. $b^2 = ac$

B. $c^2 = ab$

C. each pair of equations has exactly one root common

D. each pair of equations has two roots common

Answer: 1,2,4



Watch Video Solution

21. For the quadratic equation $x^2 + 2(a + 1)x + 9a - 5 = 0$, which of the following is/are true? (a) If $2 < a < 5$, then roots are opposite sign (b) If $a < 0$, then roots are opposite in sign (c) if $a > 7$ then both roots are negative (d) if $2 \leq a \leq 5$ then roots are unreal

A. If $2 < a < 5$, then roots are of opposite sign .

B. If $a < 0$, then roots are of opposite sign

C. If $a > 7$, then both roots are negative .

D. If $2 \leq a \leq 5$, then roots are unreal.

Answer: 2,3,4



Watch Video Solution

22. If $a, b, c \in \mathbb{R}$ and $abc < 0$, then equation $bcx^2 + (2b + c - a)x + a = 0$ has both positive roots both negative roots real roots one positive and one negative root

- A. both positive roots
- B. both negative roots
- C. real roots
- D. one positive and one negative root

Answer: 3,4

[Watch Video Solution](#)

23. The graph of the quadratic trinomial $u = ax^2 + bx + c$ has its vertex at (4, -5) and two x-intercepts, one positive and one negative. Which of the following holds good? a. $a > 0$ b. $b < 0$ c. $c < 0$ d. $8a = b$

A. $a > 0$

B. $b < 0$

C. $c < 0$

D. $8a = b$

Answer: 1,2,3

 [Watch Video Solution](#)

24. Let $a, b, c \in \mathbb{Q}^+$ satisfying $a > b > c$. Which of the following statements (s) hold true of the quadratic polynomial $f(x) = (a + b - 2c)x^2 + (b + c - 2a)x + (c + a - 2b)$? The mouth of the parabola $y = f(x)$ opens upwards Both roots of the equation $f(x) = 0$ are rational The x-coordinate of vertex of the graph is positive The product of the roots is always negative

A. The mouth of the parabola $f(x) = 0$ opens upwards

B. Both roots of the equation $f(x) = 0$ are rational

C. The x-coordinate of vertex of the graph is positive

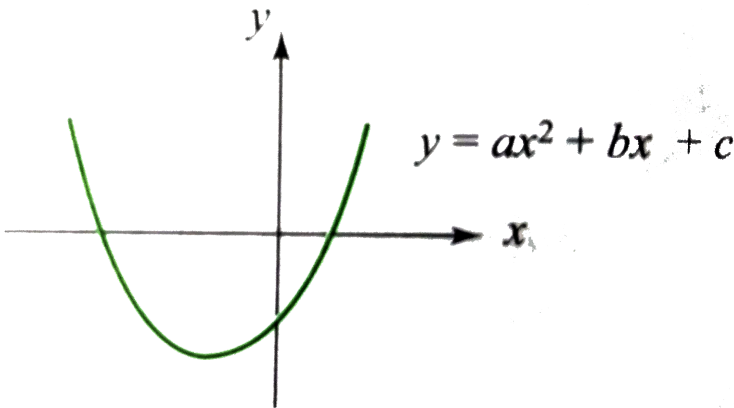
D. The product of the roots is always negative .

Answer: 1,2,3,



Watch Video Solution

25. Let $f(X) = ax^2 + bx + c$. Consider the following diagram



A. $c < 0$

B. $b > 0$

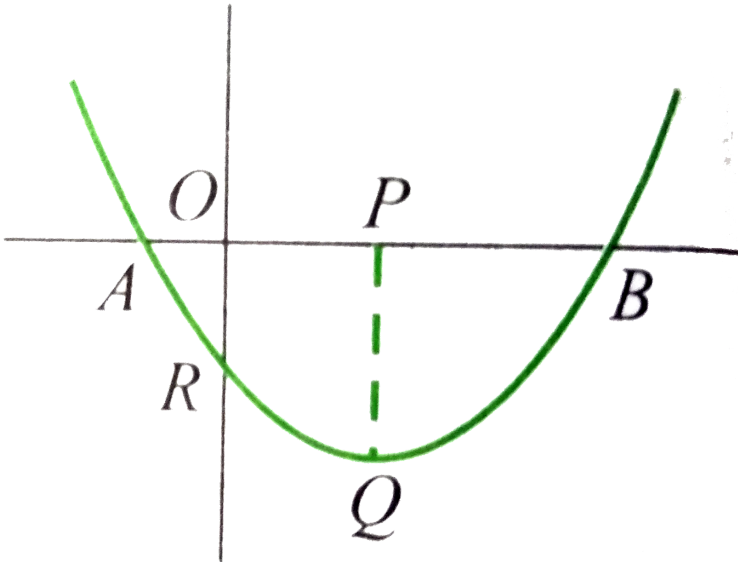
C. $a + b - c > 0$

D. $abc < 0$

Answer: 1,2,3,4

 Watch Video Solution

26. Graph of $y = ax^2 + bx + c$ is as shown in the figure . If $PQ = 9$, $OR = 5$ and $OB = 2.5$, the which of the following is /are true?



A. (a) $AB = 3$

B. (b) $y(-1) < 0$

C. (c) $(y \geq 7)f$ or $allx \geq 3$

D. (d) $ax^2 + bx + c = mx$ has real

roots for all real m

Answer: 1,3,4



Watch Video Solution

27. $ax^2 + bx + c = 0 (a > 0)$, has two roots α and β such $\alpha < -2$ and $\beta > 2$, then

A. $a - |b| + c < 0$

B. $c < 0, b^2 - 4ac > 0$

C. $4a - 2|b| + c < 0$

D. $9a - 3|b| + c < 0$

Answer: 1,2,3



Watch Video Solution

28. If the equation $ax^2 + bx + c = 0$, $a, b, c, \in \mathbf{R}$ have non-real roots, then

A. $c(a - b + c) > 0$

B. $c(a + b + c) > 0$

C. $c(4a - 2b + c) > 0$

D. none of these

Answer: 1,2,3



Watch Video Solution

29. If $\cos x - y^2 - \sqrt{y - x^2 - 1} \geq 0$, then

A. $y \geq 1$

B. $x \in \mathbf{R}$

C. $y = 1$

D. $x = 0$

Answer: 3,4



Watch Video Solution

30. If $ax^2 + (b - c)x + a - b - c = 0$ has unequal real roots for all $c \in \mathbb{R}$, then

A. $b < 0 < a$

B. $a < 0 < b$

C. $b < a < 0$

D. $b > a > 0$

Answer: 3,4



Watch Video Solution

31. If $\frac{x^2 + ax + 3}{x^2 + x + a}$ takes all real values for possible real values of x , then
a. $a^3 - 9a + 12 \leq 0$ b. $4a^5 + 39 \geq 0$ c. $a \geq \frac{1}{4}$ d. $a < \frac{1}{4}$

A. -3

B. 2

C. -1

D. -4

Answer: 1,4



Watch Video Solution

32. If the range of function $f(x) = \frac{x + 1}{k + x^2}$ contains the interval $[-0,1]$, then values of k can be equal to

A. 0

B. 0.5

C. 1.25

D. 1.5

Answer: 1,2,3



Watch Video Solution

33. Consider equation $(x - \sin \alpha)(x - \cos \alpha) - 2 = 0$. Which of the following is /are true?

- A. If $0 < \alpha < \frac{\pi}{4}$, then the equation has both roots in $(\sin \alpha, \cos \alpha)$
- B. If $\frac{\pi}{4} < \alpha < \frac{\pi}{2}$, then the equations has both roots in $(\sin \alpha, \cos \alpha)$
- C. If $0 < \alpha < \frac{\pi}{4}$, the one roots lies in $(-\infty, \sin \alpha)$ and the other in $(\sin \alpha, \infty)$
- D. If $\frac{\pi}{4} < \alpha < \frac{\pi}{2}$ then one root lies in $(-\infty, \cos \alpha)$ and the other is $(\sin \alpha, \infty)$

Answer: 3,4



Watch Video Solution

34. If the roots of the equation, $x^3 + px^2 + qx - 1 = 0$ form an increasing G.P. where p and q are real, then (a) $p + q = 0$ (b) $p \in (-3, \infty)$ (c) one of the roots is unity (d) one root is smaller than 1 and one root is greater than 1

A. $p + q = 0$

B. $p \in (-3, \infty)$

C. one of the roots is unity

D. one root is smaller than 1 and one root is greater than 1

Answer: 1,3,4

 [Watch Video Solution](#)

35. Consider a quadratic equation $ax^2 + bx + c = 0$ having roots α, β . If $4a + 2b + c > 0$, $a - b + c < 0$ and $4a - 2b + c > 0$ then $|\alpha| + |\beta|$ can be {where $[\]$ is greatest integer}

A. -2

B. -1

C. 0

D. 1

Answer: 1,2,3



Watch Video Solution

36. The equation $\left(\frac{x}{x+1}\right)^2 + \left(\frac{x}{x-1}\right)^2 = a(a-1)$ has

a. Four real roots if $a > 2$

b. Four real roots if $a < -1$

c. Two real roots if $1 < a < 2$

d. No real roots if $a < -1$

A. four real roots if $a > 2$

B. four real roots if $a < -1$

C. two real roots if $1 < a < 2$

D. no real root if $a < -1$

Answer: 1,2,3



Watch Video Solution

37. If the quadratic equations $x^2 + bx + c = 0$ and $bx^2 + cx + 1 = 0$ have a common root then prove that either $b + c + 1 = 0$ or $b^2 + c^2 + 1 = bc + b + c$.

A. $b + c + 1 = 0$

B. $b^2 + c^2 - 1 = bc - b - c$

C. $b + c - 1 = 0$

D. $b^2 + c^2 + 1 = bc + b + c$

Answer: 1,4



Watch Video Solution

38. If the inequality $\cot^2 x + (k + 1)\cot x - (k - 3) < 0$ is true for at least one $x \in (0, \pi/2)$, then $k \in$.

A. $(-\infty, 3 - 2\sqrt{5})$

B. $(3, \infty)$

C. $(-1, \infty)$

D. $(-\infty, 3)$

Answer: 1,2



Watch Video Solution

Linked Comprehension Type

1. Consider an unknown polynomial which divided by $(x - 3)$ and $(x - 4)$ leaves remainder 2 and 1, respectively. Let $R(x)$ be the remainder when this polynomial is divided by $(x - 3)(x - 4)$.

If equations $R(x) = x^2 + ax + 1$ has two distinct real roots, then exhaustive values of a are.

A. $(-2, 2)$

B. $(-\infty, -2) \cup (2, \infty)$

C. $(-2, \infty)$

D. all real numbers

Answer: 4



Watch Video Solution

2. Consider an unknown polynomial which divided by $(x - 3)$ and $(x - 4)$ leaves remainder 2 and 1, respectively. Let $R(x)$ be the remainder when this polynomial is divided by $(x - 3)(x - 4)$.

If equations $R(x) = x^2 + ax + 1$ has two distinct real roots, then exhaustive values of a are.

A. -2

B. $2/3$

C. $-1/3$

D. none of these

Answer: 3



Watch Video Solution

3. If a polynomial $f(x)$ is divided by $(x - 3)$ and $(x - 4)$ it leaves remainders as 7 and 12 respectively, then find the remainder when $f(x)$ is divided by $(x - 3)(x - 4)$



Watch Video Solution

4. Let $f(x) = x^2 + bx + c$ and $g(x) = x^2 + b_1x + c_1$

Let the real roots of $f(x) = 0$ be α, β and real roots of $g(x) = 0$ be $\alpha + k, \beta + k$ for same constant k . The least value for $f(x)$ is $-\frac{1}{4}$ and

least value of $g(x)$ occurs at $x = \frac{7}{2}$

The value of b_1 is

A. $-\frac{1}{4}$

B. -1

C. $-\frac{1}{3}$

D. $-\frac{1}{2}$

Answer: 1



Watch Video Solution

5. Let $f(x) = x^2 + bx + c$ and $g(x) = x^2 + b_1x + c_1$

Let the real roots of $f(x) = 0$ be α, β and real roots of $g(x) = 0$ be

$\alpha + k, \beta + k$ for same constant k . The least value of $f(x)$ is $-\frac{1}{4}$ and

least value of $g(x)$ occurs at $x = \frac{7}{2}$

The value of b_1 is

A. -5

B. 9

C. -8

D. -7

Answer: 4



Watch Video Solution

6. Let $f(x) = x^2 + bx + c$ and $g(x) = x^2 + b_1x + c_1$

Let the real roots of $f(x) = 0$ be α, β and real roots of $g(x) = 0$ be

$\alpha + k, \beta + k$ for same constant k . The least value of $f(x)$ is $-\frac{1}{4}$ and

least value of $g(x)$ occurs at $x = \frac{7}{2}$

The value of b_1 is

A. 3, -4

B. -3, 4

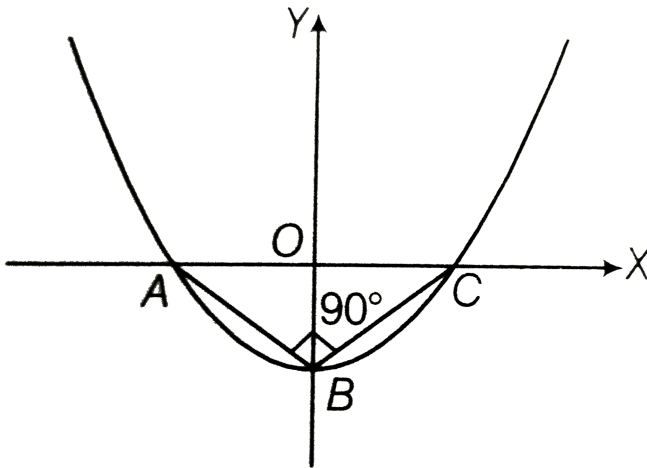
C. 3, -4

D. -3, -4

Answer: 3

 Watch Video Solution

7. In the given figure vertices of $\triangle ABC$ lie on $y = f(x) = ax^2 + bx + c$. The $\triangle ABC$ is right angled isosceles triangle whose hypotenuse $AC = 4\sqrt{2}$ units.



Number of integral value of λ for which $\frac{\lambda}{2}$ lies between the roots of $f(x) = 0$, is

A. $y = x^2 - 2\sqrt{2}$

B. $y = x^2 - 12$

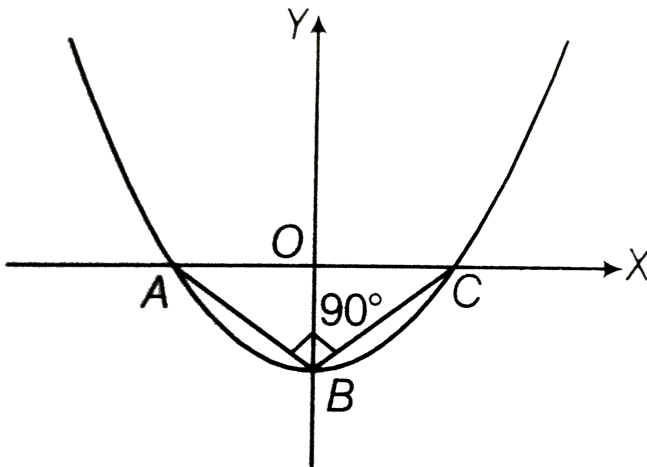
$$C. y = \frac{x^2}{2} - 2$$

$$D. y = \frac{x^2}{2\sqrt{2}} - 2\sqrt{2}$$

Answer: 4

 Watch Video Solution

8. In the given figure vertices of $\triangle ABC$ lie on $y = f(x) = ax^2 + bx + c$. The $\triangle ABC$ is right angled isosceles triangle whose hypotenuse $AC = 4\sqrt{2}$ units.



Number of integral value of λ for which $\frac{\lambda}{2}$ lies between the roots of $f(x) = 0$, is

A. -4

B. -2

C. $-2\sqrt{2}$

D. none of these

Answer: 3

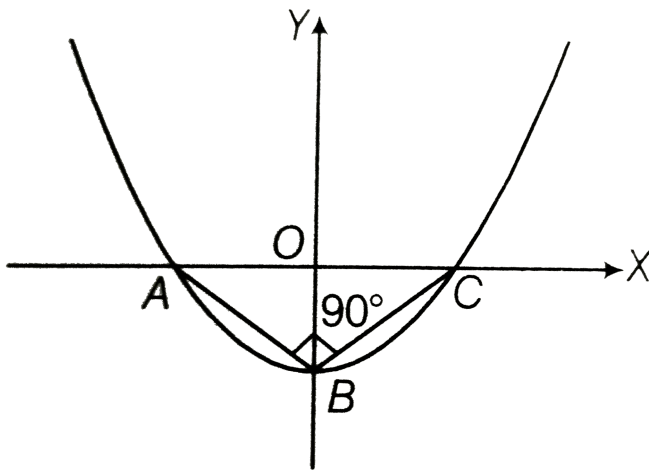


Watch Video Solution

9. In the given figure vertices of ΔABC lie on $y = f(x) = ax^2 + bx + c$.

The ΔAB is right angled isosceles triangle whose hypotenuse

$AC = 4\sqrt{2}$ units.



Number of integral value of λ for which $\frac{\lambda}{2}$ lies between the roots of $f(x) = 0$, is

- A. 6
- B. 4
- C. 5
- D. 7

Answer: 3

[Watch Video Solution](#)

10. Let $f(x) = 4x^2 - 4ax + a^2 - 2a + 2$ be a quadratic polynomial in x , a be any real number. If x -coordinate of vertex of parabola $y = f(x)$ is less than 0 and $f(x)$ has minimum value 3 for $x \in [0, 2]$ then value of a is (a) $1 + \sqrt{2}$ (b) $1 - \sqrt{2}$ (c) $1 - \sqrt{3}$ (d) $1 + \sqrt{3}$

A. 1

B. 2

C. 3

D. 0

Answer: 2



Watch Video Solution

11. Let $f(x) = 4x^2 - 4ax + a^2 - 2a + 2$ be a quadratic polynomial in x , a be any real number. If x -coordinate of the vertex of parabola $y = f(x)$ is less than 0 and $f(x)$ has minimum value 3 for $x \in [0, 2]$ then value of a is

A. 1

B. 2

C. 3

D. 0

Answer: 4



Watch Video Solution

12. Let $f(x) = 4x^2 - 4ax + a^2 - 2a + 2$ such that minimum value for the $f(x)$ for $x \in [0, 2]$ is equal to 3.

Number of values of a for which global minimum value, that is equal to 3 for $x \in [0, 2]$, occurs for the value of x lying in $(0, 2)$ is

A. $a \leq 0$ or $a \geq 4$

B. $0 \leq a \leq 4$

C. $a \geq 0$

D. none of these

Answer: 1



Watch Video Solution

13. Consider the equation $2 + |x^2 + 4x + 3| = m, m \in R$

Set of all values of m so that the given equation has two solutions is

A. $\{3\}$

B. $\{2\}$

C. $\{1\}$

D. $\{0\}$

Answer: 1



Watch Video Solution

14. Consider the equation $2 + |x^2 + 4x + 3| = m, m \in R$ Set of all real values of m so that given equation has four distinct solutions, is

A. $(0, 1)$

B. $(1, 2)$

C. $(1, 3)$

D. $(2, 3)$

Answer: 4



Watch Video Solution

15. Consider the equation $2 + |x^2 + 4x + 3| = m, m \in R$ Set of all values of m so that the given equation has two solutions is

A. $(3, \infty)$

B. $(2, \infty)$

C. $\{2\} \cup (3, \infty)$

D. None of these

Answer: 3

 [Watch Video Solution](#)

16. If $ax^2 + bx + c = 0$ have two distinct roots lying in the interval $(0, 1)$, $a, b, c \in \mathbb{N}$

The least value of a is

A. 4

B. 6

C. 7

D. 5

Answer: 4

 [Watch Video Solution](#)

17. Consider the quadratic equation $ax^2 - bx + c = 0$, $a, b, c \in \mathbb{N}$ which has two distinct real roots belonging to the interval $(1, 2)$.

The least value of b is

A. 10

B. 11

C. 13

D. 15

Answer: 2



Watch Video Solution

18. Consider the quadrature $ax^2 - bx + c = 0$, $a, b, c \in N$ which has two distinct real roots belonging to the interval (1,2).

The least value of b is

A. 4

B. 6

C. 7

D. 5

Answer: 2



Watch Video Solution

19. Consider the inequation $x^2 + x + a - 9 < 0$

The values of the real parameter a so that the given inequation has at least one positive solution:

A. $(-\infty, 37/4)$

B. $(-\infty, \infty)$

C. $(3, \infty)$

D. $(-\infty, 9)$

Answer: 4



Watch Video Solution

20. Consider the inequation $x^2 + x + a - 9 < 0$

The values of the real parameter a so that the given inequations has at least one negative solution.

A. $(-\infty, 9)$

B. $\left(\frac{37}{4}, \infty\right)$

C. $\left(-\infty, \frac{37}{4}\right)$

D. none of these

Answer: 3



Watch Video Solution

21. Consider the inequation $x^2 + x + a - 9 < 0$

The value of the parameter a so that the given inequation is true

$\forall x \in (-1, 3)$

A. $(-\infty, -3]$

B. $(-3, \infty)$

C. $[9, \infty)$

D. $(-\infty, 34/4)$

Answer: 1



Watch Video Solution

22. Consider the inequation $9^x - a3^x - a + 3 \leq 0$, where a is real parameter.

The given inequality has at least one negative solution for $a \in$ (a)

$(-\infty, 2)$ (b) $(3, \infty)$ (c) $(-2, \infty)$ (d) $(2, 3)$

A. $(-\infty, 2)$

B. $(3, \infty)$

C. $(-2, \infty)$

D. $(2, 3)$

Answer: 4



[Watch Video Solution](#)

23. Consider the inequality $9^x - a \cdot 3^x - a + 3 \leq 0$, where a is a real parameter.

The given inequality has at least one positive solution for $a \in$

A. $(-\infty, -2)$

B. $[3, \infty)$

C. $(2, \infty)$

D. $[-2, \infty)$

Answer: 3



[Watch Video Solution](#)

24. Consider the inequality $9^x - a \cdot 3^x - a + 3 \leq 0$, where a is a real parameter.

The given inequality has at least one positive solution for $a \in$

A. $(-\infty, 3)$

B. $[2, \infty)$

C. $(3, \infty)$

D. $[-2, \infty)$

Answer: 2



Watch Video Solution

25. $(af(\mu) < 0)$ is the necessary and sufficient condition for a particular real number μ to lie between the roots of a quadratic equations $f(x) = 0$, where $f(x) = ax^2 + bx + c$. Again if $f(\mu_1)f(\mu_2) < 0$, then exactly one of the roots will lie between μ_1 and μ_2 .

If $|b| > |a + c|$, then

A. one roots of $f(x)=0$ is positive, the other is negative

B. exactly one of the roots of $f(x) = 0$ lie in $(-1,1)$

C. 1 lies between the roots of $f(x) = 0$

D. both the roots of $f(x) = 0$ are less than 1

Answer: 2



Watch Video Solution

26. An analytic balance has uncertainty in measurement equal to $\pm 1mg$.

Then report the result in terms of percentage if the weight of a compound is

a. $1g$ b. $10g$ c. $100g$

A. one roots is less than 0, the is posititve, the other is negative.

B. exactly one of the roots lies in $(0,1)$

C. both the roots lie in $(0,1)$

D. at least one of the roots lies in $(0,1)$

Answer: 1



Watch Video Solution

27. ($af(\mu) < 0$) is the necessary and sufficient condition for a particular real number μ to lie between the roots of a quadratic equations $f(x) = 0$, where $f(x) = ax^2 + bx + c$. Again if $f(\mu_1)f(\mu_2) < 0$, then exactly one of the roots will lie between μ_1 and μ_2 .

If $c(a + b + c) < 0 < (a + b + c)a$, then

A. one roots is less than 0, the other is greater than 1

B. one roots lies in $(-\infty, 0)$ and other in $(0, 1)$

C. both the roots lie in $(0, 1)$

D. one roots lies in $(0,1)$ and other in $(1, \infty)$

Answer: 2



Watch Video Solution

28. Given $|px^2 + qx + r| \leq |Px^2 + Qx + R| \forall x \in R$ and

$$d = q^2 - 4pr > 0 \text{ and } D = Q^2 - 4PR > 0$$

Which of the following must be true?

A. (a) $|p| \geq |P|$

B. (b) $|p| \leq |P|$

C. (c) $|p| = |P|$

D. (d) All of these

Answer: 2



Watch Video Solution

29. If $(x + 2)$ is a common factor of $(px^2 + qx + r)$ and $(qx^2 + px + r)$

then (a) $p = q$ or $p + q + r = 0$ (b) $p = r$ or $p + q + r = 0$ (c) $q = r$ or

$$p + q + r = 0 \text{ (d) } p = q = -\frac{1}{2}r$$

A. $|d| \leq |D|$

B. $|d| \geq |D|$

C. $|d| = |D|$

D. None of these

Answer: 1



Watch Video Solution

30. Consider the equation $x^4 + 2ax^3 + x^2 + 2ax + 1 = 0$, where $a \in R$.

If exactly two roots are positive and two roots are negative, then the number of integral values of a is

A. $(-\infty, -1/4)$

B. $(5/4, \infty)$

C. $(-\infty, -3/4)$

D. none of these

Answer: 3

[Watch Video Solution](#)

31. Consider the equation $x^4 + 2ax^3 + x^2 + 2ax + 1 = 0$, where $a \in R$.

If exactly two roots are positive and two roots are negative, then the number of integral values of a is

A. $(3/4, \infty)$

B. $(-5/4, \infty)$

C. $(-\infty, 1/4)$

D. none of these

Answer: 1

[Watch Video Solution](#)

32. Consider the equation $x^4 + 2ax^3 + x^2 + 2ax + 1 = 0$ where $a \in R$.

Also range of function $f(x) = x + \frac{1}{x}$ is $(-\infty, -2] \cup [2, \infty)$ if

equation has at least two distinct positive real roots then all possible values of a are

A. 2

B. 1

C. 0

D. 3

Answer: 3



Watch Video Solution

33. The real numbers x_1, x_2, x_3 satisfying the equation

$x^3 - x^2 + bx + \gamma = 0$ are in A.P. Find the intervals in which β and γ lie.

A. $\left(-\infty, \frac{1}{3}\right)$

B. $\left(-\infty, -\frac{1}{3}\right)$

C. $\left(\frac{1}{3}, \infty\right)$

D. $\left(-\frac{1}{3}, \infty\right)$

Answer: 1

 [Watch Video Solution](#)

34. The real numbers x_1, x_2, x_3 satisfying the equation $x^3 - x^2 + bx + \gamma = 0$ are in A.P. Find the intervals in which β and γ lie.

A. $\left(-\frac{1}{9}, \infty\right)$

B. $\left(-\frac{1}{27}, +\infty\right)$

C. $\left(\frac{2}{9}, +\infty\right)$

D. none of these

Answer: 2

 [Watch Video Solution](#)

35. If the equation $x^4 - \lambda x^2 + 9 = 0$ has four real and distinct roots, then λ lies in the interval

A. $(-\infty, -6) \cup (6, \infty)$

B. $(0, \infty)$

C. $(6, \infty)$

D. $(-\infty, -6)$

Answer: C



Watch Video Solution

36. If the equation has no real root, then λ lies in the interval

A. $(-\infty, 0)$

B. $(-\infty, 6)$

C. $(6, \infty)$

D. $(0, \infty)$

Answer: B



Watch Video Solution

37. If the equation $x^4 - \lambda x^2 + 9$ has only two real roots, then the set of values of λ is

A. $(-\infty, -6)$

B. $(-6, 6)$

C. $\{6\}$

D. ϕ

Answer: D



Watch Video Solution

MATRIX MATCH TYPE

1. Match the following for the equation $x^2 + a|x| + 1 = 0$ where, a is a parameter.

List I	List II
a. No real roots	p. $a < -2$
b. Two real roots	q. ϕ
c. Three real roots	r. $a = -2$
d. Four distinct real roots	s. $a \geq 0$

 Watch Video Solution

2. Match the following for lists:

List I (Number of positive integers for which)	List II
a. one root is positive and the other is negative for the equation $(m-2)x^2 - (8-2m)x - (8-3m) = 0$	p. 0
b. exactly one root of equation $x^2 - m(2x-8) - 15 = 0$ lies in interval $(0, 1)$	q. infinite
c. the equation $x^2 + 2(m+1)x + 9m - 5 = 0$ has both roots negative	r. 1
d. the equation $x^2 + 2(m-1)x + m + 5 = 0$ has both roots lying on either sides of 1	s. 2

3. Match the following lists:

List I	List II
a. If $x^2 + ax + b = 0$ has roots α, β and $x^2 + px + q = 0$ has roots $-\alpha, \gamma$, then	p. $(1 - bq)^2$ $= (a - pb)(p - aq)$
b. If $x^2 + ax + b = 0$ has roots α, β and $x^2 + px + q = 0$ has roots $1/\alpha, \gamma$, then	q. $(4 - bq)^2$ $= (4a + 2pb)(-2p - aq)$
c. If $x^2 + ax + b = 0$ has roots α, β and $x^2 + px + q = 0$ has roots $-2/\alpha, \gamma$, then	r. $(1 - 4bq)^2$ $= (a + 2bp)(-2p - 4aq)$
d. If $x^2 + ax + b = 0$ has roots α, β and $x^2 + px + q = 0$ has roots $-1/(2\alpha), \gamma$, then	s. $(q - b)^2$ $= (aq + bp)(-p - a)$

 [Watch Video Solution](#)

4. Consider equation $((x^2 + x)^2) + a(x^2 + x) + 4 = 0$ Match the values of a in Lists II for the types of roots in Lists I.

- A.** $a \quad b \quad c \quad d$
 (1) $p \quad q \quad r \quad s$
- B.** $a \quad b \quad c \quad d$
 (2) $q \quad r \quad r \quad p$

- C. $a \ b \ c \ d$
 (3) $r \ p \ s \ q$
- D. $a \ b \ c \ d$
 (4) $q \ s \ p \ r$

Answer: 1



View Text Solution

5. If $ax^2 + bx + c = 0$ where $a \neq 0$ is satisfied by α, β, α^2 and β^2 where $\alpha\beta \neq 0$. Let set S be the set of all possible unordered pairs (α, β) .

Then match the following lists:

List I	List II
a. The number of elements in set S is	p. 2
b. The sum of all possible values of $(\alpha + \beta)$ of the pair (α, β) in set S is	q. 3
c. The sum of all possible values of $\alpha\beta$ of the pair (α, β) in set S is	r. 4
d. The sum of all possible values of $\alpha^2 + \beta^2$ of the pair (α, β) in set S is, where $\alpha, \beta \in R$ is	s. 1

- A. $a \ b \ c \ d$
 (1) $q \ s \ s \ r$
- B. $a \ b \ c \ d$
 (2) $r \ s \ q \ p$
- C. $a \ b \ c \ d$
 (3) $q \ s \ r \ p$

- D. $\begin{matrix} a & b & c & d \\ (4) & r & s & p & q \end{matrix}$

Answer: 1

 Watch Video Solution

6. Consider equation $x^4 - 6x^3 + 8x^2 + 4ax - 4a^2 = 0, a \in R$. Then match the following lists:

List I	List II
a. If equation has four distinct roots then	p. $a \in \phi$
b. If equation has exactly two distinct roots then	q. $a \in (-1/2, 2)$
c. If equation has no real roots then	r. $a \in (-\infty, -1/2) \cup (2, \infty)$
d. If equation has four distinct positive roots then	s. $a \in (-\infty, 2)$

- A. $\begin{matrix} a & b & c & d \\ (1) & q & s & s & r \end{matrix}$
- B. $\begin{matrix} a & b & c & d \\ (2) & r & s & q & p \end{matrix}$
- C. $\begin{matrix} a & b & c & d \\ (3) & q & s & r & p \end{matrix}$
- D. $\begin{matrix} a & b & c & d \\ (4) & q & r & p & p \end{matrix}$

Answer: 4



Watch Video Solution

NUMERICAL VALUE TYPE

1. If $x = 2 + 2^{2/3} + 2^{1/3}$, then the value of $x^3 - 6x^2 + 6x$ is



Watch Video Solution

2. If $\sqrt{\sqrt{\sqrt{x}}} = (3x^4 + 4)^{\frac{1}{64}}$, then the value of x^4 is ____.



Watch Video Solution

3. Sum of the values of x satisfying the equation $\sqrt{2x + \sqrt{2x + 4}} = 4$ is ____.



Watch Video Solution

4. If $a^2 - 4a + 1 = 4$, then the value of $\frac{a^3 - a^2 + a - 1}{a^2 - 1}$ ($a^2 \neq 1$)

 [Watch Video Solution](#)

5. If a and b are positive numbers and each of the equations $x^2 + ax + 2b = 0$ and $x^2 + 2bx + a = 0$ has real roots, then the smallest possible value of $(a + b)$ is _____.

 [Watch Video Solution](#)

6. Given that $x^2 - 3x + 1 = 0$, then the value of the expression $y = x^9 + x^7 + x^{-9} + x^{-7}$ is divisible by prime number?

 [Watch Video Solution](#)

7. If $\sin^2 \alpha$, $\cos^2 \alpha$ and $-\operatorname{cosec}^2 \alpha$ are the zeros of $P(x) = x^3 + x^2 + ax + b$ ($a, b \in R$). Then $P(2)$ equals _____.



Watch Video Solution

8. If the equation $x^2 - 4x - (3k - 1)|x - 2| - 2k + 8 = 0$, $k \in R$, has exactly three distinct solutions, then k is equal to ____.



Watch Video Solution

9. Statement 1 : If $\cos^2 \frac{\pi}{8}$ is a root of the equation $x^2 + ax + b = 0$, where $a, b \in \mathbb{Q}$, then ordered pair (a, b) is $\left[-1, \frac{1}{8} \right]$. Statement 2: If $a + mb = 0$ and m is irrational, then $a, b = 0$.



Watch Video Solution

10. Given α and β are the roots of the quadratic equation $x^2 - 4x + k = 0$ ($k \neq 0$). If $\alpha\beta, \alpha\beta^2, \alpha^3 + \beta^3$ are in geometric progression, then the value of $7k/2$ equals _____.



Watch Video Solution

11. Let α_1, β_1 be the roots $x^2 - 6x + p = 0$ and α_2, β_2 be the roots $x^2 - 54x + q = 0$. If $\alpha_1, \beta_1, \alpha_2, \beta_2$ form an increasing G.P., then sum of the digits of the value of $(q - p)$ is _____.

 [Watch Video Solution](#)

12. Let α and β be the solutions of the quadratic equation $x^2 - 1154x + 1 = 0$, then the value of $\alpha^{\frac{1}{4}} + \beta^{\frac{1}{4}}$ is equal to _____.

 [Watch Video Solution](#)

13. The quadratic equation $x^2 + mx + n = 0$ has roots which are twice those of $x^2 + px + m = 0$ and n and $p \neq 0$. The value of n/p is _____.

 [Watch Video Solution](#)

14. Suppose a, b, c are the roots of the cubic $x^3 - x^2 - 2 = 0$. Then the value of $a^3 + b^3 + c^3$ is ____.

 [Watch Video Solution](#)

15. Polynomial $P(x)$ is divided by $(x - 3)$, the remainder is 6. If $P(x)$ is divided by $(x^2 - 9)$, then the remainder is $g(x)$. Then the value of $g(2)$ is _____.

 [Watch Video Solution](#)

16. If α and β are the roots of the equation $x^2 - 6x + 12 = 0$ and the value of $(\alpha - 2)^{24} - \frac{(\beta - 6)^8}{\alpha^8} + 1$ is 4^a , then the value of a is ____.

 [Watch Video Solution](#)

17. Let a and b be the roots of the equation $x^2 - 10cx - 11d = 0$ and those of $x^2 - 10ax - 11b = 0$ are c, d then $f \in d$ the value of $f + b + c + d$ when $a = b = c = d$



Watch Video Solution

18. Let $a, b \in R$ and $ab \neq 1$. If $6a^2 + 20a + 15 = 0$ and $15b^2 + 20b + 6 = 0$ then the value of $\frac{4030b^3}{ab^2 - 9(ab + 1)^3}$ is ____.



Watch Video Solution

19. If there exists at least one real x which satisfies both the equations $x^2 + 2x \sin y + 1 = 0$, where $y \in (0, \pi/2)$, and $ax^2 + x + 1 = 0$, then the value of $a + \sin y$ is ____.



Watch Video Solution

20. If the equation $x^2 + 2(\lambda + 1)x + \lambda^2 + \lambda + 7 = 0$ has only negative roots, then the least value of λ equals _____.

 [Watch Video Solution](#)

21. All the values of k for which the quadratic polynomial $f(x) = 2x^2 + kx + k^2 + 5$ has two distinct zeroes and only one of them satisfying 0

 [Watch Video Solution](#)

22. If set of values a for which $f(x) = ax^2 - (3 + 2a)x + 6a \neq 0$ is positive for exactly three distinct negative integral values of x is $(c, d]$, then the value of $(c^2 + d)$ is equal to _____.

 [Watch Video Solution](#)

23. $a, b, \text{ and } c$ are all different and non-zero real numbers on arithmetic progression. If the roots of quadratic equation $ax^2 + bx + c = 0$ are α and β such that $\frac{1}{\alpha} + \frac{1}{\beta}, \alpha + \beta, \text{ and } \alpha^2 + \beta^2$ are in geometric progression the value of a/c will be ____.

 [Watch Video Solution](#)

24. Let $P(x) = \frac{5}{4} + 6x - 9x^2$ and $Q(y) = -4y^2 + 4y + \frac{13}{2}$. if there exists unique pair of real numbers (x, y) such that $P(x)Q(y) = 20$, then the value of $(6x + 10y)$ is ____.

 [Watch Video Solution](#)

25. If equation $x^4 - (3m + 2)x^2 + m^2 = 0 (m > 0)$ has four real solutions which are in A.P., then the value of m is ____.

 [Watch Video Solution](#)

26. If the equation $2x^2 + 4xy + 7y^2 - 12x - 2y + t = 0$, where t is a parameter has exactly one real solution of the form (x, y) , then the sum of $(x + y)$ is equal to _____.



Watch Video Solution

27. Let $P(x) = x^3 - 8x^2 + cx - d$ be a polynomial with real coefficients and with all its roots being distinct positive integers. Then number of possible values of c is _____.



Watch Video Solution

28. Let $P(x) = x^4 + ax^3 + bx^2 + cx + d$ be a polynomial such that $P(1) = 1, P(2) = 8, P(3) = 27, P(4) = 64$ then the value of $152 - P(5)$ is _____.



Watch Video Solution

29. Suppose $a, b, c \in I$ such that the greatest common divisor for $x^2 + ax + b$ and $x^2 + bx + c$ is $(x + 1)$ and the least common multiple of $x^2 + ax + b$ and $x^2 + bx + c$ is $(x^3 - 4x^2 + x + 6)$. Then the value of $|a + b + c|$ is equal to _____.

 [Watch Video Solution](#)

30. Integral part of the product of non-real roots of equation $x^4 - 4x^3 + 6x^2 - 4x = 69$ is _____.

 [Watch Video Solution](#)

31. If α, β and γ are roots of equation $x^3 - 3x^2 + 1 = 0$, then the value of $\left(\frac{\alpha}{1+\alpha}\right)^3 + \left(\frac{\beta}{1+\beta}\right)^3 + \left(\frac{\gamma}{1+\gamma}\right)^3$ is _____.

 [Watch Video Solution](#)

32. If the roots of the cubic, $x^3 + ax^2 + bx + c = 0$ are three consecutive positive integers, then the value of $\frac{a^2}{b+1}$ is equal to _____.



Watch Video Solution

33. The function $f(x) = ax^3 + bx^2 + cx + d$ has three positive roots. If the sum of the roots of $f(x)$ is 4, the largest possible integer values of c/a is _____.



Watch Video Solution

34. If $b^2 - 4ac \leq 0$ ("where" $a \neq 0$ and $a, b, c, x, y \in R$) satisfies the system $ax^2 + x(b-3) + c + y = 0$ and $ay^2 + y(b-1) + c + 3x = 0$, then value of $\frac{x}{y}$ is _____.



Watch Video Solution

35. If $(a^2 - 14a + 13)x^2 + (a + 2)x - 2 = 0$ does not have two distinct real roots, then the maximum value of $a^2 - 15a$ is _____.

 [Watch Video Solution](#)

36. Let $px^2 + qx + r = 0$ be a quadratic equation ($p, q, r \in R$) such that its roots are α and β . If $p + q + r < 0$, $p - q + r < 0$ and $r > 0$, then the value of $[\alpha] + [\beta]$ is (where $[x]$ denotes the greatest integer x) _____.

 [Watch Video Solution](#)

37. Let $x^2 + y^2 + xy + 1 \geq a(x + y) \forall x, y \in R$, then the number of possible integer (s) in the range of a is _____.

 [Watch Video Solution](#)

38. function $f, R \rightarrow R, f(x) = \frac{3x^2 + mx + n}{x^2 + 1}$, if the range of function is $[-4, 3]$, find the value of $|m+n|$ is



Watch Video Solution

39. If a, b, c are non-zero real numbers, then find the minimum value of the expression $\left(\frac{(a^4 + 3a^2 + 1)(b^4 + 5b^2 + 1)(c^4 + 7c^2 + 1)}{a^2b^2c^2} \right)$ which is not divisible by prime number.



Watch Video Solution

40. If $a, b, \in R$ such that $a + b = 1$ and $(1 - 2ab)(a^6 + b^3) = 12$. The value of $(a^2 + b^2)$ is equal to ___.



Watch Video Solution

41. If the cubic $2x^3 - 9x^2 + 12x + k = 0$ has two equal roots then minimum value of $|k|$ is ____.



Watch Video Solution

42. Let $a, b, \text{ and } c$ be distinct nonzero real numbers such that

$$\frac{1 - a^3}{a} = \frac{1 - b^3}{b} = \frac{1 - c^3}{c} \text{ The value of } (a^3 + b^3 + c^3) \text{ is } \underline{\hspace{2cm}}.$$



Watch Video Solution

43. Evaluate :

(i) i^{135}

(ii) i^{-47}

(iii) $(-\sqrt{-1})^{4n+3}, n \in N$

(iv) $\sqrt{-25} + 3\sqrt{-4} + 2\sqrt{-9}$



Watch Video Solution

Archives JEE MAIN (single correct Answer Type)

1. If the roots of the equation $bx^2 + cx + a = 0$ be imaginary, then for all real values of x , the expression $3b^2x^2 + 6bcx + 2c^2$ is (1) greater than $4ab$ (2) less than $4ab$ (3) greater than $4ab$ (4) less than $4ab$

A. greater than $4ab$.

B. less than $4ab$

C. greater than $-4ab$.

D. less than $-4ab$.

Answer: 3

 [Watch Video Solution](#)

2. Show that the equation $e^{\sin x} - e^{-\sin x} - 4 = 0$ has no real solution.

A. infinite number of real roots

B. no real roots

C. exactly one real root

D. exactly four real roots

Answer: 2

 [Watch Video Solution](#)

3. If a, b, c are positive real numbers such that the equations $ax^2 + bx + c = 0$ and $bx^2 + cx + a = 0$, have a common root, then

A. 1:2:3

B. 3:2:1

C. 1:3:2

D. 3:1:2

Answer: 1



Watch Video Solution

4. Let α and β be the roots of equation $px^2 + qx + r = 0, p \neq 0$. If p, q, r are in A.P. and $\frac{1}{\alpha} + \frac{1}{\beta} = 4$, then the value of $|\alpha - \beta|$ is :

A. $\frac{\sqrt{61}}{9}$

B. $\frac{2\sqrt{17}}{9}$

C. $\frac{\sqrt{34}}{9}$

D. $\frac{2\sqrt{13}}{9}$

Answer: 4



Watch Video Solution

5. The sum of all real values of X satisfying the equation

$(x^2 - 5x + 5)^{x^2 + 4x - 60} = 1$ is:

A. -4

B. 6

C. 5

D. 3

Answer: 4



Watch Video Solution

6. If, for a positive integer n , the quadratic equation, $x(x + 1) + (x - 1)(x + 2) + \dots + (x + n - 1)(x + n) = 10n$ has two consecutive integral solutions, then n is equal to : (1) 10 (2) 11 (3) 12 (4) 9

A. 11

B. 12

C. 9

D. 10

Answer: 1



Watch Video Solution

7.

Let

$$S = \{x \in R : x \geq 0 \text{ and } 2 \mid (\sqrt{x} - 3) + \sqrt{x}(\sqrt{x} - 6) + 6 = 0\}$$

then S (1) is an empty set (2) contains exactly one element (3) contains exact;y two elements (4) contains exactly four elements

A. contains exactly four elements

B. is an empty set

C. contains exactly one element

D. contains exactly two elements

Answer: 4



Watch Video Solution

JEE ADVANCED (Single Correct Type)

1. Q. Let p and q real number such that $p \neq 0, p^2 \neq q$ and $p^2 \neq -q$. if α and β are non-zero complex number satisfying $\alpha + \beta = -p$ and $\alpha^3 + \beta^3 = q$, then a quadratic equation having $\frac{\alpha}{\beta}$ and $\frac{\beta}{\alpha}$ as its roots is

A. $(p^3 + q)x^2 - (p^3 + 2p)x + (p^3 + q) = 0$

B. $(p^3 + q)x^2 - (p^3 - 2p)x + (p^3 + q) = 0$

C. $(p^3 - q)x^2 - (5p^3 - 2p)x + (p^3 - q) = 0$

D. $(p^3 - q)x^2 - (5p^3 + 2p)x + (p^3 - q) = 0$

Answer: 2



Watch Video Solution

2. The value of b for which the equation $x^2 + bx - 1 = 0$ and $x^2 + x + b = 0$ have one root in common is (a) $-\sqrt{2}$ (b) $-i\sqrt{3}$ (c) $i\sqrt{5}$ (d) $\sqrt{2}$

A. $-\sqrt{2}$

B. $-i\sqrt{3}$

C. $\sqrt{2}$

D. $\sqrt{3}$

Answer: B



Watch Video Solution

3. Let α and β be the roots of $x^2 - 6x - 2 = 0$ with $\alpha > \beta$ if $a_n = \alpha^n - \beta^n$ for $n \geq 1$ then the value of $\frac{a_{10} - 2a_8}{2a_9}$

A. 1

B. 2

C. 3

D. 4

Answer: C



Watch Video Solution

4. The quadratic equation $p(x) = 0$ with real coefficients has purely imaginary roots. Then the equation $p(p(x)) = 0$ has only purely imaginary roots at real roots two real and purely imaginary roots neither real nor purely imaginary roots

A. only purely imaginary roots

B. all real roots

C. two real and two purely imaginary roots

D. neither real nor purely imaginary roots

Answer: 3



Watch Video Solution

5. Let $-\frac{\pi}{6} < \theta < -\frac{\pi}{12}$. Suppose α_1 and β_1 , are the roots of the equation $x^2 - 2x \sec \theta + 1 = 0$ and α_2 and β_2 are the roots of the equation $x^2 + 2x \tan \theta - 1 = 0$. If $\alpha_1 > \beta_1$ and $\alpha_2 > \beta_2$, then $\alpha_1 + \beta_2$ equals:

A. $2(\sec \theta - \tan \theta)$

B. $2 \sec \theta$

C. $-2 \tan \theta$

D. 0

Answer: 4



Watch Video Solution

JEE ADVANCED (Multiple Correct Answer Type)

1. Let S be the set of all non-zero real numbers such that the quadratic equation $\alpha x^2 - x + \alpha = 0$ has two distinct real roots x_1 and x_2 satisfying the inequality $|x_1 - x_2| < 1$. Which of the following intervals

is (are) a subset (s) of S ? a. $\left(\frac{1}{2}, \frac{1}{\sqrt{5}}\right)$ b. $\left(\frac{1}{\sqrt{5}}, 0\right)$ c. $\left(0, \frac{1}{\sqrt{5}}\right)$ d.

$\left(\frac{1}{\sqrt{5}}, \frac{1}{2}\right)$

A. $\left(-\frac{1}{2}, -\frac{1}{\sqrt{5}}\right)$

B. $\left(-\frac{1}{\sqrt{5}}, 0\right)$

C. $\left(0, \frac{1}{\sqrt{5}}\right)$

D. $\left(\frac{1}{\sqrt{5}}, \frac{1}{2}\right)$

Answer: 1,4



Watch Video Solution

JEE ADVANCED (Multiple Correct Answer Type)

1. Let p, q be integers and let α, β be the roots of the equation, $x^2 - x - 1 = 0$, where $\alpha \neq \beta$. For $n = 0, 1, 2, \dots$, let $a_n = p\alpha^n + q\beta^n$.

FACT : If a and b are rational number and $a + b\sqrt{5} = 0$, then $a = 0 = b$.

Then a_{12} is

A. $a_{11} - a_{10}$

B. $a_{11} + a_{10}$

C. $2a_{11} + a_{10}$

D. $a_{11} + 2a_{10}$

Answer: 2



Watch Video Solution

2. Let p, q be integers and let α, β be the roots of the equation, $x^2 - x - 1 = 0$, where $\alpha \neq \beta$. For $n = 0, 1, 2, \dots$, let $a_n = p\alpha^n + q\beta^n$.

FACT : If a and b are rational number and $a + b\sqrt{5} = 0$, then $a = 0 = b$. If

$a_4 = 28$, then $p + 2q =$ **7 (b) 21 (c) 14 (d) 12**

A. 21

B. 14

C. 7

D. 12

Answer: 4



Watch Video Solution

JEE ADVANCED (Numerical Value Type)

1. The number of distinct real roots of

$$x^4 - 4x^3 + 12x^2 + x - 1 = 0 \text{ is } _ _ _ .$$



[Watch Video Solution](#)