



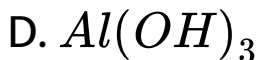
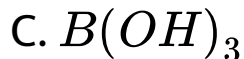
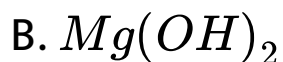
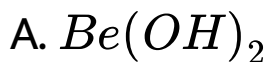
# CHEMISTRY

## BOOKS - AIIMS PREVIOUS YEAR PAPERS

### AIIMS 2004

#### Chemistry

1. Which of the following is only acidic in nature?

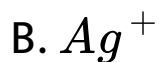


**Answer: C**



**Watch Video Solution**

2. Which one of the following forms with an excess of  $CN^-$  (Cyanide) a complex having coordination number two



**Answer: B**



**Watch Video Solution**

**3. Which of the following is not considered as an organometallic compound?**

A. Cis-platin

B. Ferrocence

C. Zeise's salt

D. Grignard reagent.

**Answer: A**



**Watch Video Solution**

4. Dimethyl glyoxime gives a red precipitate with  $Ni^{2+}$ , which is used for its detection. To

get this precipitate readily the best  $pH$  range is

A.  $< 1$

B.  $2 - 3$

C.  $3 - 4$

D.  $9 - 11$

**Answer: D**



**Watch Video Solution**

5. The element which forms oxides in all oxidation states  $+1$  to  $+5$  is.

A. N

B. P

C. As

D. Sb.

**Answer: A**



**Watch Video Solution**

6. For decolourisation of 1mol of  $KMnO_4$ , the moles of  $H_2O_2$  required is

A.  $\frac{1}{2}$

B.  $\frac{3}{2}$

C.  $\frac{5}{2}$

D.  $\frac{7}{2}$

**Answer: C**



**Watch Video Solution**

7. The statement true for  $N_3^-$  is

A. It has a non-linear structure

B. It is called pseudohalogen

C. The formal oxidation state of nitrogen in this anion is -1

D. It is isoelectronic with  $NO_2$

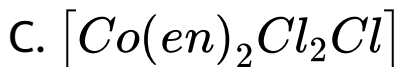
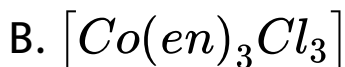
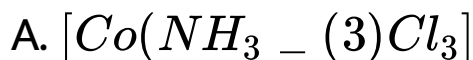
**Answer: C**



**Watch Video Solution**



8. Which of the following does not have optical isomer?



**Answer: A**



**Watch Video Solution**

9. For the electron affinity of halogens (with  $-ve$  sign), which of the following is correct?

A.  $\text{Br} > \text{F}$

B.  $\text{F} > \text{Cl}$

C.  $\text{Br} > \text{Cl}$

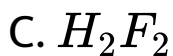
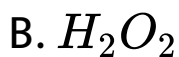
D.  $\text{F} > \text{I}$

**Answer: D**



**Watch Video Solution**

10. Shape of  $O_2F_2$  is similar to that of



**Answer: B**



**Watch Video Solution**

11. The liquified metal expanding on solidification is :

A. Ga

B. Al

C. Zn

D. Cu

**Answer: A**



**Watch Video Solution**

12. The compound insoluble in water is

A. Mercurous nitrate

B. Mercuric nitrate

C. Mercurous chloride

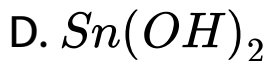
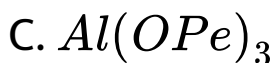
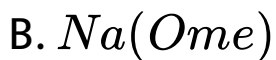
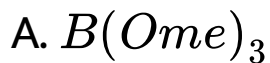
D. Mercurous perchlorate.

**Answer: C**



**Watch Video Solution**

13. Which of the following imparts colour to the burner flame?



**Answer: A**



**Watch Video Solution**

14. The  $ONO$  bond angle is maximum in

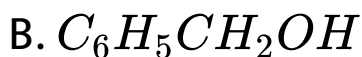
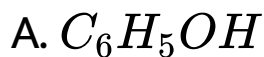


**Answer: D**



**Watch Video Solution**

15. Among the following the dissociation constant is highest for



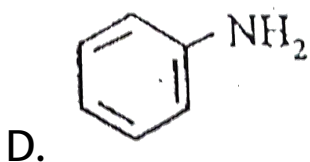
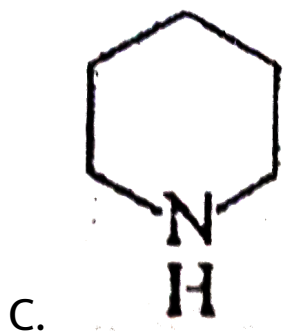

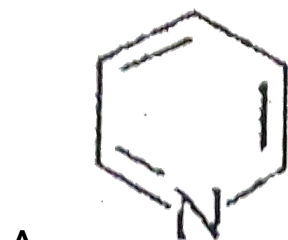
**Answer: D**



**Watch Video Solution**



16. The strongest base among the following .



**Answer: C**



**Watch Video Solution**

**17.** The compound having only primary hydrogen atoms is

A. Isobutene

B. 2,3-dimethylbutene

C. Cyclohexane

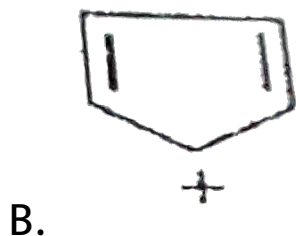
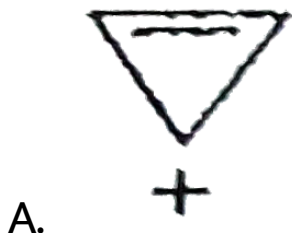
D. Propyne.


Answer: A::D



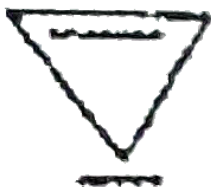
Watch Video Solution

18. Among the following, the aromatic compound is





C.



D.

**Answer: A**



**Watch Video Solution**

**19.** The dipole moment is the highest for

A. trans-2-butene

B. 1,3-Dimethylbenzene

C. Acetophenone

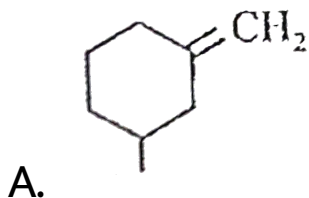
D. Ethanol

**Answer: C**

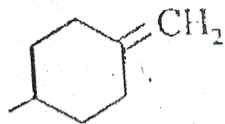


**Watch Video Solution**

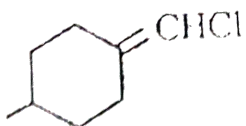
20. The geometrical isomerism is shown by:



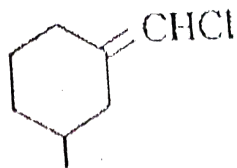
B.



C.



D.

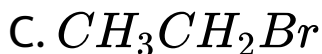
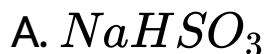


**Answer: D**



**Watch Video Solution**

21. The reagent used for the separation of Acetadehyde from acetophenone is

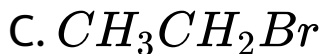
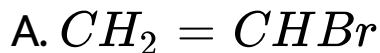


**Answer: A**



**Watch Video Solution**

22. Among the following, the most reactive towards alcoholic KOH is



**Answer: D**



**Watch Video Solution**



23. Among the following, one which reacts most readily with ethanol is

- A. p-nitrobenzyl bromide
- B. p-chlorobenzyl bromide
- C. p-methoxybenzyl bromide.
- D. p-methylbenzyl bromide.

**Answer: C**



**Watch Video Solution**

24. The nucleic acid base having two possible binding sites is:

A. thymine

B. cytosine

C. guanine

D. adenine.

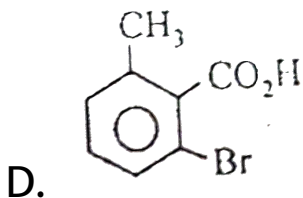
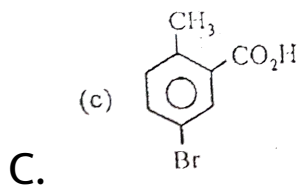
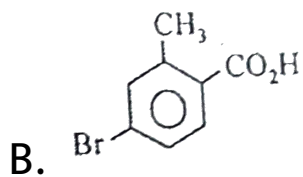
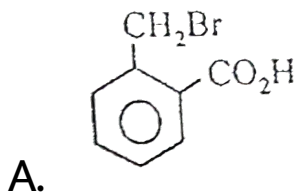
**Answer: C**



**Watch Video Solution**

25.  $\alpha$ -Toluic acid in reaction with  $Br_2 + Fe$

gives

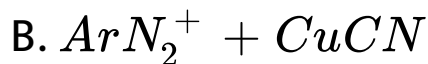
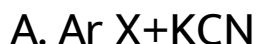


**Answer: C**



**Watch Video Solution**

**26.** Aromatic nitriles( $ArCN$ ) are not prepared by reaction:



**Answer: A**



**Watch Video Solution**

27. Melting points are normally highest for

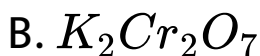
- A. Tertiary amides
- B. Secondary amides
- C. Primary Amides
- D. Amines.

**Answer: C**



Watch Video Solution

28. The most suitable reagent for the conversion of  $RCH_2OH$  to  $RCHO$  is

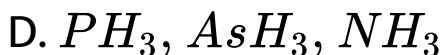
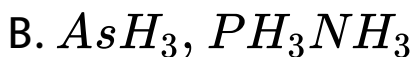


D. PCC(Pyridinium chloro chromate.)

**Answer: D**



29. Which of the following is arranged in the increasing order of enthalpy of vaporization?



**Answer: D**



30. For principle quantum number  $n=4$ , the total number of orbitals having  $l=3$  is

A. 3

B. 7

C. 5

D. 9

**Answer: B**



**Watch Video Solution**



31. The average osmotic pressure of human blood is 7.8 bar at  $37^{\circ}\text{C}$ . What is the concentration of an aqueous NaCl solution that could be used in the blood stream?

A. 0.16 mol/L

B. 0.32 mol/L

C. 0.60 mol/L

D. 0.45 mol/L

**Answer: B**



**Watch Video Solution**

32. How much energy is released when 6 mole of octane is burnt in air ? Given  $\Delta H_f^\circ$  for  $CO_2(g)$ ,  $H_2O(g)$  and  $C_8H_{18}(l)$  respectively are  $-490$ ,  $-240$  and  $+160\text{KJ/mol}$

A.  $-6.2\text{KJ}$

B.  $-37.4\text{KJ}$

C.  $-35.5\text{KJ}$


D.  $-20.0\text{KJ}$ .

**Answer: B**



**Watch Video Solution**

**33.** For the equilibrium



at 1 atm 298K

A. Standard free energy change is equal to

zero ( $\Delta G < 0$ )

B. standard Free energy change is equal to

zero ( $\Delta G^\circ = 0$ )

C. Standard free energy change is less zero

$$(\Delta G^\circ)$$

D. Standard free energy change is greater

than zero ( $\Delta G^\circ > 0$ )

**Answer: B**



**Watch Video Solution**

**34.** The crystal system of a compound with unit cell dimensions  $a=0.387, b=0.387$  and

$c=0.504$  nm and  $\alpha = \beta = 90^\circ$  and  $\gamma = 120^\circ$

is

A. Cubic

B. hexagonal

C. orthorhombic

D. rhombohedral

**Answer: B**



**Watch Video Solution**

35. What is the  $pH$  of  $0.01M$  glycine solution?

For glycine,  $K_{a_1} = 4.5 \times 10^{-3}$  and

$K_{a_2} = 1.7 \times 10^{-10}$  at  $298K$

A. 3.0

B. 10.0

C. 6.1

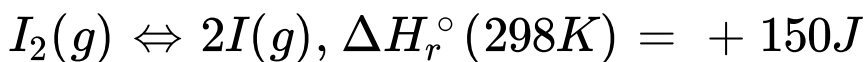
D. 7.2

**Answer: C**



**Watch Video Solution**

36. Of the following, which change will shift the reaction towards the product ?



- A. Increase in concentration of I
- B. Decrease in concentration of  $I_2$
- C. Increase in temperature
- D. Increase in total pressure.

**Answer: C**



**Watch Video Solution**

37. Which of the following statements is true for the electrochemical Daniel cell?

A. Electrons flow from copper electrode to zinc electrode.

B. Current flows from zinc electrode to copper electrode.

C. Cations move toward copper electrode

D. Cations move toward zinc electrode.

**Answer: C**





Watch Video Solution

**38.** Which of the following is a biodegradable polymer ?

A. Cellulose

B. Polythene

C. Polyvinyl chloride

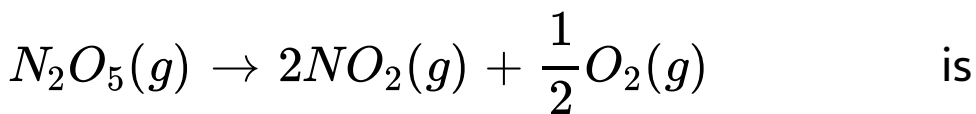
D. nylon-6

**Answer: A**



Watch Video Solution

39. The rate constant  $k$ , for the reaction



$2.3 \times 10^{-2} s^{-1}$ . Which equation given below

describes the change of  $[N_2O_5]$  with time ?

$[N_2O_5]_0$  and  $[N_2O_5]_t$  correspond to

concentration of  $N_2O_5$  initially and at time,  $t$  ?

A.  $[N_2O_5]_t = [N_2O_5]_0 + kt$

B.  $[N_2O_5]_0 = [N_2O_5]_t e^{kt}$

C.  $\log[N_2O_5]_t = \log[N_2O_5]_0 + kt$

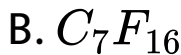
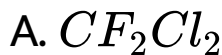
$$D. \ln \frac{[N_2O_5]_0}{[N_2O_5]_t} = kt.$$

**Answer: D**



**Watch Video Solution**

**40.** Ozone in stratosphere is depleted by



**Answer: A**



**Watch Video Solution**

**41.** Assertion:  $HClO_4$  is a stronger acid than  $HClO_3$

Reason: Oxidation state of Cl in  $HClO_4$  is +8 and in  $HClO_3$  is +5

A. If both assertion and reason are true and reason is the explanation of assertion.

B. If both assertion and reason are true but reason is not the correct explanation of assertion

C. If assertion is true but reason is false

D. If both assertion and reason are false.

**Answer: B**



**Watch Video Solution**

42. The free gaseous  $Cr$  atom has six unpaired electrons.

Half-filled s-orbital has greater stability.

A. If both assertion and reason are true and reason is the explanation of assertion.

B. If both assertion and reason are true but reason is not the correct explanation of assertion

C. If assertion is true but reason is false

D. If both assertion and reason are false.

**Answer: C**



**Watch Video Solution**

**43.** Assertion:  $[Ni(en)_3]Cl_2$  has lower stability than  $[Ni(NH_3)_6]Cl_2$

Reason: In  $[Ni(en)_3]Cl_2$  the geometry of Ni is trigonal bipyramidal .

A. If both assertion and reason are true and reason is the explanation of assertion.

B. If both assertion and reason are true but reason is not the correct explanation of assertion

C. If assertion is true but reason is false

D. If both assertion and reason are false.

**Answer: D**



**Watch Video Solution**



**44.** Assertion: Sb(III) is not precipitated as sulphide when in its alkaline solution  $H_2S$  is passed.

Reason: The concentration of  $S^{2-}$  ion in alkaline medium is inadequate for precipitation

A. If both assertion and reason are true and reason is the explanation of assertion.

B. If both assertion and reason are true but reason is not the correct explanation of assertion

C. If assertion is true but reason is false

D. If both assertion and reason are false.

**Answer: C**



**Watch Video Solution**

**45.** Assertion: Nuclear binding energy per nucleon is in the order  ${}^9_4\text{Be} > {}^7_3\text{Li} > {}^4_2\text{He}$ .

Reason: Binding energy per nucleon increases linearly with difference in number of neutrons and protons.

A. If both assertion and reason are true and reason is the explanation of assertion.

B. If both assertion and reason are true but reason is not the correct explanation of

assertion

C. If assertion is true but reason is false

D. If both assertion and reason are false.

**Answer: D**



**View Text Solution**

**46.** Assertion (A): magnesium is not present in enamel of human teeth.

Reason (R ): Magnesium is an essential

elements for biological functions of human beings.

A. If both assertion and reason are true and reason is the explanation of assertion.

B. If both assertion and reason are true but reason is not the correct explanation of assertion

C. If assertion is true but reason is false

D. If both assertion and reason are false.

**Answer: B**



**Watch Video Solution**

**47.** Assertion. Carboxypeptidase is an exopeptidase.

Reason. It cleaves the N-terminal bond.

A. If both assertion and reason are true and reason is the explanation of assertion.

B. If both assertion and reason are true but reason is not the correct explanation of assertion

C. If assertion is true but reason is false

D. If both assertion and reason are false.

**Answer: C**



**Watch Video Solution**

**48.** Assertion : Sucrose is a non – reducing sugar.

Reason : It has glycosidic linkage.

A. If both assertion and reason are true and reason is the explanation of assertion.

B. If both assertion and reason are true but reason is not the correct explanation of assertion

C. If assertion is true but reason is false



D. If both assertion and reason are false.

**Answer: A**



**Watch Video Solution**

**49.** Assertion: Isobutanal does not give iodoform test.

Reason: It does not have  $\alpha$ -hydrogen.

A. If both assertion and reason are true and reason is the explanation of

assertion.

- B. If both assertion and reason are true but reason is not the correct explanation of assertion
- C. If assertion is true but reason is false
- D. If both assertion and reason are false.

**Answer: C**



**Watch Video Solution**

**50.** Assertion: Styrene on reaction with HBr gives 2-bromo-2-phenylethane.

Benzyl radical is more stable than alkyl radical.

A. If both assertion and reason are true and reason is the explanation of assertion.

B. If both assertion and reason are true but reason is not the correct explanation of assertion

C. If assertion is true but reason is false

D. If both assertion and reason are false.

**Answer:**



**Watch Video Solution**

**51. Assertion:**The  $pK_a$  of acetic acid is lower than that of phenol.

**Reason:**Phenoxide ion is more resonance stabilised.

A. If both assertion and reason are true and reason is the explanation of assertion.

B. If both assertion and reason are true but reason is not the correct explanation of assertion

C. If assertion is true but reason is false

D. If both assertion and reason are false.

**Answer: C**



**Watch Video Solution**

**52. Assertion:** 2-Bromobutane on reaction with sodium ethoxide in ethanol gives 1-butene as a major product

**Reason:** 1-butene is more stable than 2-butene.

A. If both assertion and reason are true and reason is the explanation of assertion.

B. If both assertion and reason are true but reason is not the correct explanation of

assertion

C. If assertion is true but reason is false

D. If both assertion and reason are false.

**Answer: D**



**Watch Video Solution**

**53.** Assertion: The major products formed by heating  $C_6H_5CH_2OCH_3$  with HI are  $C_6H_5CH_2I$  and  $CH_3OH$

Reason: Benzyl cation is more stable than methyl cation.

A. If both assertion and reason are true and reason is the explanation of assertion.

B. If both assertion and reason are true but reason is not the correct explanation of assertion

C. If assertion is true but reason is false

D. If both assertion and reason are false.



**Answer: A**



**Watch Video Solution**

**54.** Assertion: Molar entropy of vaporization of water is different from ethanol.

Reason: Water is more polar than ethanol.

A. If both assertion and reason are true and reason is the explanation of assertion.

B. If both assertion and reason are true but reason is not the correct explanation of assertion

C. If assertion is true but reason is false

D. If both assertion and reason are false.

**Answer: B**



**Watch Video Solution**

**55. Assertion:** A quious gold colloidal solution is red in colour.

**Reason:** The colour arises due to scattering of light by colloidal gold particles.

A. If both assertion and reason are true and reason is the explanation of assertion.

B. If both assertion and reason are true but reason is not the correct explanation of assertion

C. If assertion is true but reason is false

D. If both assertion and reason are false.

**Answer: A**



**Watch Video Solution**

**56.** Assertion ( $A$ ):  $Cu$  gets readily corroded in acidic aqueous solution.

Reason ( $R$ ): Free energy of the process is positive.

A. If both assertion and reason are true and reason is the explanation of assertion.

B. If both assertion and reason are true but reason is not the correct explanation of assertion

C. If assertion is true but reason is false

D. If both assertion and reason are false.

**Answer: D**



**Watch Video Solution**

57. Assertion: Addition of silver ions to a mixture of aqueous sodium chloride and sodium bromide solution will first precipitate AgBr than AgCl.

$K_{sp}$  of  $AgCl$   $>$   $K_{sp}$  of AgBr.

A. If both assertion and reason are true and reason is the explanation of assertion.

B. If both assertion and reason are true but reason is not the correct explanation of assertion

C. If assertion is true but reason is false

D. If both assertion and reason are false.

**Answer: C**



**Watch Video Solution**

**58.** Assertion: Alcohols are dehydrated to hydrocarbons in the presence of acidic zeolites.

Reason: Zeolites are porous catalysts.

A. If both assertion and reason are true and reason is the explanation of assertion.

B. If both assertion and reason are true but reason is not the correct explanation of assertion



C. If assertion is true but reason is false

D. If both assertion and reason are false.

**Answer: B**



**Watch Video Solution**

**59.** Assertion : All F - S - F angle in  $SF_4$  are greater than  $90^\circ$  but less than  $180^\circ$ .

Reason : The lone pair -bond pair repulsion is weaker than bond pair -bond pair repulsion

A. If both assertion and reason are true and reason is the explanation of assertion.

B. If both assertion and reason are true but reason is not the correct explanation of assertion

C. If assertion is true but reason is false

D. If both assertion and reason are false.

**Answer: C**



**Watch Video Solution**

**60.** Assertion: Effusion rate of oxygen is smaller than nitrogen.

Reason: Molecular size of nitrogen is smaller than oxygen.

A. If both assertion and reason are true and reason is the explanation of assertion.

B. If both assertion and reason are true but reason is not the correct explanation of

assertion

C. If assertion is true but reason is false

D. If both assertion and reason are false.

**Answer: C**



**Watch Video Solution**