



CHEMISTRY

BOOKS - AIIMS PREVIOUS YEAR PAPERS

AIIMS 2010

Chemistry

1. Butter is an example of which type of colloid?

- A. Solid in liquid
- B. Liquid in solid
- C. Liquid in liquid

D. Gas in liquid.

Answer: C



Watch Video Solution

2. What are constituents of 'Mischmetal'?

A. La, Fe

B. La, Ce

C. Fe, Ce

D. Ce, Cu

Answer: B





[Watch Video Solution](#)

3. For a 1st order reaction if concentration is doubled then rate of reaction becomes

A. doubles

B. half

C. four times

D. remains same.

Answer: A



[Watch Video Solution](#)

4. In tetragonal crystal system, which of following

A. All axial lengths and all axial angles are equal.

B. All three axial lengths are equal.

C. All three axial angles are equal.

D. Two axial angles are equal, but the third is different.

Answer: C



Watch Video Solution

5. Which of the following is correct?

- A. Ionic radius is proportional to atomic number.
- B. Ionic radius is inversely proportional to atomic mass.
- C. Ionic radius is inversely proportional to effective nuclear charge.
- D. All are correct.

Answer: C



Watch Video Solution

6. The strained tetracyclic alkane is isomerized thermally to the cyclic alkene. The reaction involves

A. free radical

B. carbocation

C. carbanion

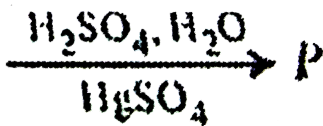
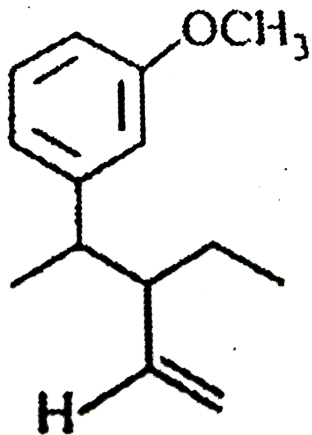
D. carbene.

Answer: A

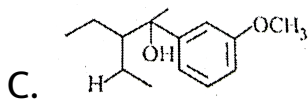
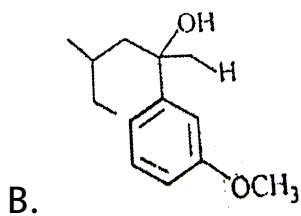
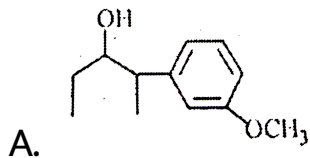


View Text Solution

7.



The product P is



D. none of these

Answer: C

 Watch Video Solution

8. For a reaction $X \rightarrow Y$, the graph of the product concentration (x) versus time (t) came out to be a straight line passing through the origin. Hence and time would be the graph of $\frac{d[X]}{dt}$ and the time would be

A. straight line with a negative slope and an intercept on y-axis

B. straight line with a positive slope and an intercept on y-axis

C. a straight line parallel to x-axis

D. a hyperbola.

Answer: C



Watch Video Solution

9. A factory produces 40 kg of calcium in two hours by electrolysis. How much aluminium can be produced by same current in 2 hours if current efficiency is 50%?

A. 22 kg

B. 18 kg

C. 9 kg

D. 27 kg

Answer: B



Watch Video Solution

10. Equal weight of CO and CH_4 are mixed together in an empty container at 300K. The fraction of total pressure exerted by CH_4 is

A. $\frac{16}{17}$

B. $\frac{7}{11}$

C. $\frac{8}{9}$

D. $\frac{5}{16}$

Answer: C

 Watch Video Solution

11. Match list I with list II and select the correct answer using the codes given below the lists.

| | List I Metal ion | | List II Magnetic moment(BM) |
|----|---------------------|----|--------------------------------|
| A. | Cr^{3+} | 1. | $\sqrt{35}$ |
| B. | Fe^{2+} | 2. | $\sqrt{30}$ |
| C. | Ni^{2+} | 3. | $\sqrt{24}$ |
| D. | Mn^{2+} | 4. | $\sqrt{15}$ |
| | | 5. | $\sqrt{8}$ |

A. $A - 1, B - 3, C - 5, D - 4$

B. $A - 2, B - 3, C - 5, D - 1$

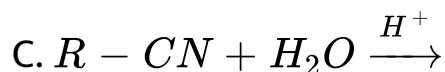
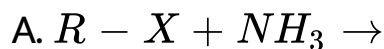
C. $A - 4, B - 3, C - 5, D - 1$

D. $A - 4, B - 5, C - 3, D - 1$

Answer: C

 Watch Video Solution

12. Which of the following reactions does not yield an amine?



Answer: C



Watch Video Solution

13. The chemical name for melamine is

A. 1,3,5-Triamino-2,4,6-triazine

B. 2,4,6-Triamino-1,3,5-triazine

C. 2-Amino-1,3,5-triazine

D. 2,4-Diamino-1,3,5-triazine.

Answer: B



Watch Video Solution

14. Bromine is added to cold dilute aqueous solution of NaOH. The mixture is boiled. Which of the following statements is not true?

A. During the reaction bromine is present in four different oxidation states.

B. The greatest difference between the various oxidation states of bromine is 5.

C. On acidification of the final mixture bromine is formed.

D. Disproportionation of bromine occurs during the reaction.

Answer: C



Watch Video Solution

15. A complex $PtCl_4 \cdot 5NH_3$ shows a molar conductance of $402 \text{ ohm}^{-1} \text{ cm}^2 \text{ mol}^{-1}$ in water and precipitate three mole of $AgCl$ with $AgNO_3$. The formula of the complex is

- A. $[Pt(NH_3)_6]Cl_4$
- B. $[Pt(NH_3)_4Cl_2]Cl_2$
- C. $[Pt(NH_3)_5Cl]Cl_3$
- D. $[Pt(NH_3)_3Cl_3]Cl$

Answer: C

 Watch Video Solution

16.

| Electrolyte | Λ^{∞} ($S\text{cm}^2\text{mol}^{-1}$) |
|------------------------|--|
| <i>KCl</i> | 149.9 |
| <i>KNO₃</i> | 145.0 |
| <i>HCl</i> | 426.2 |
| <i>NaOAc</i> | 91.0 |
| <i>NaCl</i> | 126.5 |

Calculate Λ_{HOAc}^{∞} using appropriate molar conductance of the electrolytes listed above at infinite dilution in H_2O at $25^{\circ}C$

A. 517.2

B. 552.7

C. 390.7

D. 217.5

Answer: C



Watch Video Solution

17. In the ground state of Cu^+ , the number of shells occupied, subshells occupied, filled orbitals and unpaired electrons respectively are

A. 4, 8, 15, 0

B. 3, 6, 15, 1

C. 3, 6, 14, 0

D. 4, 7, 14, 2

Answer: C



Watch Video Solution

18. Which of the following conditions is not correct for resonating structures?

- A. The contributing structures must have the same number of unpaired electrons.
- B. The contributing structures should have similar energies.

C. The contributing structures should be so written that unlike charges reside on atoms that are far apart.

D. The positive charge should be present on the electropositive element and the negative charge on the electronegative element.

Answer: C



Watch Video Solution

19. CaO and NaCl have the same crystal structure and approximately the same ionic radii. If U is the lattice

energy of NaCl, the approximate lattice energy of CaO is

A. $U/2$

B. U

C. $2U$

D. $4U$

Answer: D

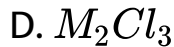


Watch Video Solution

20. The phosphate of a metal has the formula $MHPO_4$.

The formula of its chloride would be

A. MCl



Answer: B



Watch Video Solution

21. Two flasks X and Y have capacity 1 L and 2 L respectively and each of them contains 1 mole of a gas. The temperature of the flasks are so adjusted that average speed of molecules in X is twice as those in Y. The pressure in flask X would be

A. same as that in Y

B. half of that in Y

C. twice of that in Y

D. 8 times of that in Y.

Answer: D



Watch Video Solution

22. Match List I with List II and select the correct answer using the codes given below the lists:

List I

List II

A. $\left(\frac{\delta G}{\delta P}\right)_T$

1. μ_{JT}

B. $\left(\frac{\delta G}{\delta T}\right)_P$

2. T

C. $\left(\frac{\delta H}{\delta S}\right)_P$

3. $-S$

D. $\left(\frac{\delta T}{\delta P}\right)_H$

4. P

5. V

A.

| | A | B | C | D |
|-----|---|---|---|---|
| (a) | 5 | 1 | 2 | 4 |

B.

| | A | B | C | D |
|-----|---|---|---|---|
| (b) | 5 | 3 | 2 | 4 |

C.

| | A | B | C | D |
|-----|---|---|---|---|
| (c) | 3 | 5 | 2 | 1 |

D.

| | A | B | C | D |
|-----|---|---|---|---|
| (d) | 5 | 3 | 2 | 1 |

Answer: D



Watch Video Solution

23. What is the pH of $0.01M$ glycine solution? For glycine, $K_{a_1} = 4.5 \times 10^{-3}$ and $K_{a_2} = 1.7 \times 10^{-10}$ at $298K$

A. 3.0

B. 10.0

C. 7.06

D. 8.2

Answer: C



Watch Video Solution

24. Which of the following sequence contains atomic number of only representative elements?

A. 55,12, 48,53

B. 13,33,54,80

C. 3,33,53,87

D. 22,33,55,66.

Answer: C



View Text Solution

25. 100cm^3 of a given sample of H_2O_2 , gives 1000cm^3 of O_2 at S.T.P. The given sample is

A. 10% H_2O_2

B. 90% H_2O_2

C. 10 volume H_2O_2

D. 100 volume H_2O_2

Answer: C



Watch Video Solution

26. Beryllium and aluminium exhibit many properties which are similar . But, the two elements differ in

A. maximum covalency in compounds

B. exhibiting amphoteric nature in their oxides

C. forming covalent halides

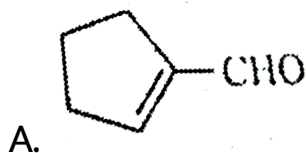
D. forming polymeric hydrides

Answer: A

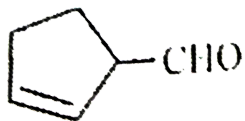
 [Watch Video Solution](#)

27. Cyclohexene on ozonolysis followed by reaction with zinc dust and water gives compound E. Compound E on further treatment with aqueous KOH yields compound

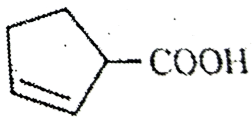
F. Compound F is



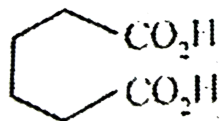
B.



C.



D.

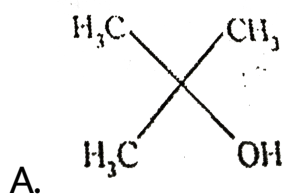


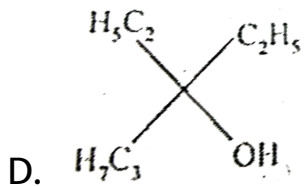
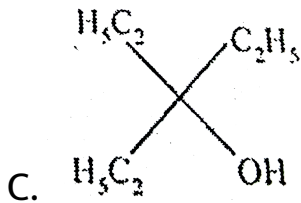
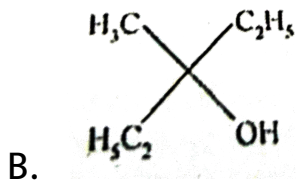
Answer: A



Watch Video Solution

28. Ethyl ester $\xrightarrow[\text{excess}]{\text{CH}_3\text{MgBr}}$ P, the product P is





Answer: A

 [Watch Video Solution](#)

29. The compound which on reaction with cold nitrous acid gives oily nitrosoamine is

A. methyl amine

B. ethyl amine

C. diethyl amine

D. triethyl anine

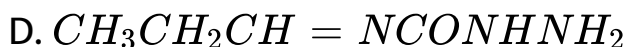
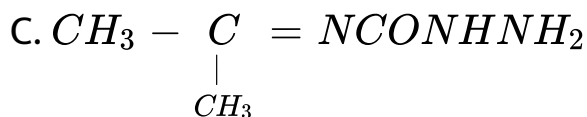
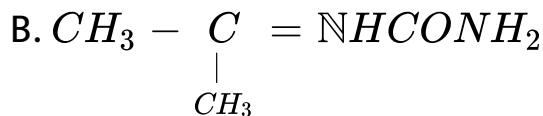
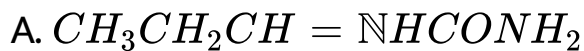
Answer: C



Watch Video Solution

30. Compound A (molecular formula C_3H_8O) is treated with acidified potassium dichromate to form a product B (molecular formula C_3H_6O). B forms shining silver mirror on warming with ammoniacal silver nitrate. B when treated with an aqueous solution of

$H_2NCONHNH_2$, HCl and sodium acetate gives a product C. Identify the structure of C.



Answer: A



Watch Video Solution

31. Assume that you are travelling at a speed of 90 km/h in a small car with a mass of 1050 kg. If the uncertainty

in the velocity of the car is 1% $\left(\Delta v = 0.9k \frac{m}{h}\right)$, what is the uncertainty (in meters) in the position of the car ?

A. $\Delta x \geq 1 \times 10^{-35} m$

B. $\Delta x \geq 2 \times 10^{-37} m$

C. $\Delta x \geq 2 \times 10^{-36} m$

D. $\Delta x \geq 4 \times 10^{-38} m$

Answer: B



Watch Video Solution

32. When 25 g of Na_2SO_4 is dissolved in 10^3 Kg of solution, its concentration will be

A. 2.5 ppm

B. 25 ppm

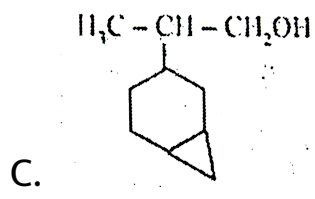
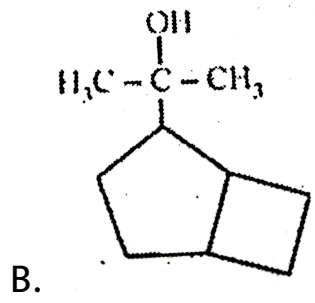
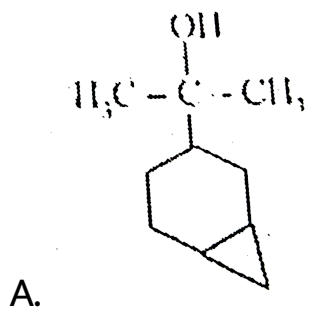
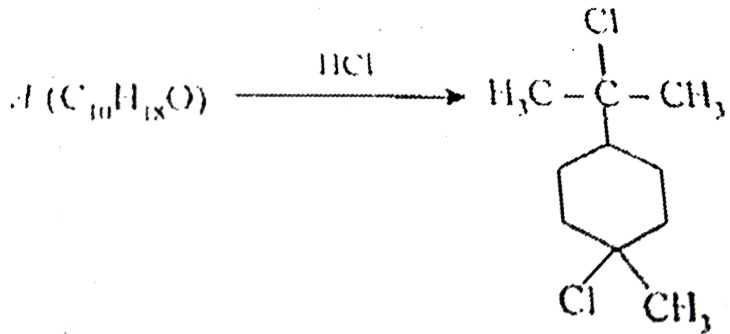
C. 250 ppm

D. 100 ppm

Answer: B

 [Watch Video Solution](#)

33. Degree of unsaturation of $A = 2$, it contains no double or triple bonds.



D. none of these

Answer: A

 [Watch Video Solution](#)

34. The shape and hybridisation of some xenon oxyfluorides are given. Choose the wrong set.

A. $XeOF_2$ - T-shapes sp^3d

B. $XeOF_4$ - Square pyramidal sp^3d^2

C. XeO_2F_2 - Distorted trigonal bipyramidal – sp^3d

D. XeO_3F_2 - Octahedral sp^3d

Answer: D

 [Watch Video Solution](#)

35. The standard half-cell reduction potential for $Ag' | Ag$ is 0.7991 V at 25°C . Given the experimental value $K_{sp} = 1.56 \times 10^m$ for $AgCl$, calculate the standard half-cell reduction potential for the $Ag|AgCl$ electrode.

A. 0.2192V

B. -0.2192V

C. -1.2192 V

D. 1.2192V

Answer: A



Watch Video Solution

36. Which of the following acids will not evolve H_2 gas on reaction with alkali metals?

A. hydrazoic acid

B. perxenic acid

C. boric acid

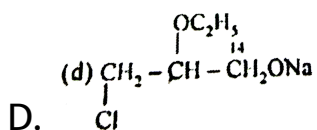
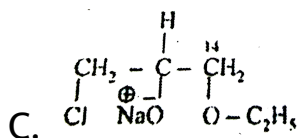
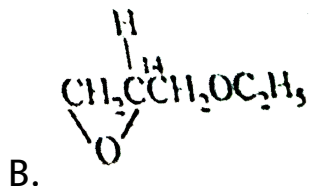
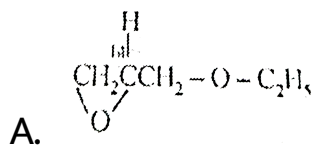
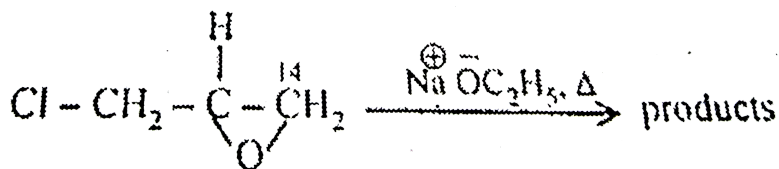
D. none of these

Answer: D



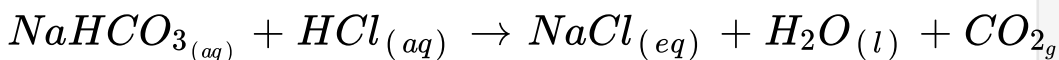
Watch Video Solution

37. The major product of the following reaction is



Answer: B

38. Stomach acid, a dilute solution of HCl in water, can be neutralized by reaction with sodium hydrogen carbonate.



How many milliliters of 0.125 M $NaHCO_3$ solution are needed to neutralize 18.0 mL of 0.100 M HCl?

- A. 14.4 mL
- B. 12.0 mL
- C. 14.0 mL
- D. 13.2 mL

Answer: A



Watch Video Solution

39. For the electrochemical cell,



$$E^\circ (M^+ / M) = 0.44V \text{ and } E^\circ (X / X^-) = 0.33V.$$

From this data one can deduce that

A. $M + X \rightarrow M^+ + X^-$ is the spontaneous reaction

B. $M^+ + X^- \rightarrow M + X$ is the spontaneous reaction

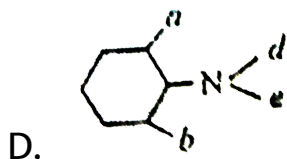
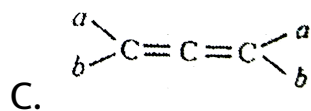
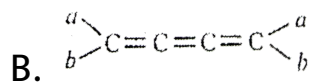
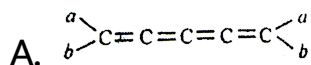
C. $E_{\text{cell}} = 0.77V$

D. $E_{\text{cell}} = -0.77V$

Answer: B

 Watch Video Solution

40. Which is optically inactive?



Answer: B

 Watch Video Solution

41. Assertion : Magnesium is extracted by the electrolysis of fused mixture of $MgCl_2$, $NaCl$ and $CaCl_2$.

Reason: Calcium chloride acts as a reducing agent.

- A. If both assertion and reason are true and reason is the correct explanation of assertion
- B. If both assertion and reason are true but reason is not the correct explanation of assertion
- C. If assertion is true but reason is false
- D. If both assertion and reason are false.

Answer: C



Watch Video Solution

42. Assertion (A) : The equilibrium constant is fixed and characteristic for any given chemical reaction at a specified temperature.

Reason (R) : The composition of the final equilibrium mixture at a particular temperature depends upon the starting amount of reactants.

A. If both assertion and reason are true and reason is the correct explanation of assertion

- B. If both assertion and reason are true but reason is not the correct explanation of assertion
- C. If assertion is true but reason is false
- D. If both assertion and reason are false.

Answer: B



Watch Video Solution

43. Assertion : PCl_5 is covalent in gaseous and liquid state but ionic in solid state.

Reason: PCl_5 in solid state consists of tetrahedral PCl_4^+ cation and octahedral PCl_6^- anion.

- A. If both assertion and reason are true and reason is the correct explanation of assertion
- B. If both assertion and reason are true but reason is not the correct explanation of assertion
- C. If assertion is true but reason is false
- D. If both assertion and reason are false.

Answer: A



Watch Video Solution

44. Statement-1: Zinc displaces copper from copper sulphate solution.

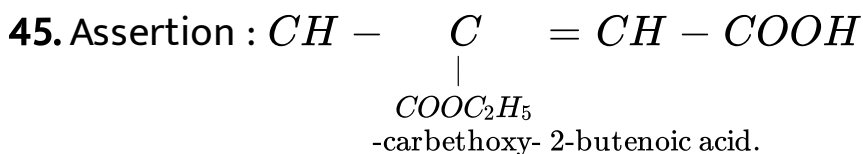
Statement-2: The E_{298}° of Zn is -0.76 volts and that of Cu is +0.34 volts.

- A. If both assertion and reason are true and reason is the correct explanation of assertion
- B. If both assertion and reason are true but reason is not the correct explanation of assertion
- C. If assertion is true but reason is false
- D. If both assertion and reason are false.

Answer: A



Watch Video Solution



Reason: Principal functional group gets lowest number followed by double bond or triple bond.

- A. If both assertion and reason are true and reason is the correct explanation of assertion
- B. If both assertion and reason are true but reason is not the correct explanation of assertion
- C. If assertion is true but reason is false
- D. If both assertion and reason are false.

Answer: A



[View Text Solution](#)

46. Assertion: Helium has the highest value of ionisation energy among all known elements.

Reason: Helium has the highest value of electron affinity among all known elements.

- A. If both assertion and reason are true and reason is the correct explanation of assertion
- B. If both assertion and reason are true but reason is not the correct explanation of assertion
- C. If assertion is true but reason is false
- D. If both assertion and reason are false.

Answer: C



Watch Video Solution

47. Assertion : The nuclear isomers are the atoms with the same atomic number and same mass number, but with different radioactive properties.

Reason : The nucleus in the excited state will evidently have a different half-life as compared to that in the ground state.

A. If both assertion and reason are true and reason is the correct explanation of assertion

- B. If both assertion and reason are true but reason is not the correct explanation of assertion
- C. If assertion is true but reason is false
- D. If both assertion and reason are false.

Answer: A



Watch Video Solution

48. Assertion : Conductivity of silicon increases by doping it with group-15 elements.

Reason : Doping means introduction of small amount of impurities like P, As or Bi into the pure crystal.

- A. If both assertion and reason are true and reason is the correct explanation of assertion
- B. If both assertion and reason are true but reason is not the correct explanation of assertion
- C. If assertion is true but reason is false
- D. If both assertion and reason are false.

Answer: B



Watch Video Solution

49. Assertion : The overall order of the reaction is the sum of the exponents of all the reactants in the rate

expression.

Reason: There are many higher order reactions.

- A. If both assertion and reason are true and reason is the correct explanation of assertion
- B. If both assertion and reason are true but reason is not the correct explanation of assertion
- C. If assertion is true but reason is false
- D. If both assertion and reason are false.

Answer: C



Watch Video Solution

50. Assertion : Transition metals are poor reducing agents.

Reasons : Transition metals form numerous alloys with other metals.

- A. If both assertion and reason are true and reason is the correct explanation of assertion
- B. If both assertion and reason are true but reason is not the correct explanation of assertion
- C. If assertion is true but reason is false
- D. If both assertion and reason are false.

Answer: B



51. Assertion : Aldol condensation can be catalysed both by acids and bases.

Reason : β - hydroxy aldehydes or ketones readily undergo acid catalysed dehydration.

- A. If both assertion and reason are true and reason is the correct explanation of assertion
- B. If both assertion and reason are true but reason is not the correct explanation of assertion
- C. If assertion is true but reason is false
- D. If both assertion and reason are false.

Answer: B



Watch Video Solution

52. (A) The position of an element in periodic table after emission of one α and two β -partilce remians unchanged.

(R) Emission of one α and two β particles gives isotope of the parent element which acquires same position in the periodic table.

A. If both assertion and reason are true and reason is the correct explanation of assertion

- B. If both assertion and reason are true but reason is not the correct explanation of assertion
- C. If assertion is true but reason is false
- D. If both assertion and reason are false.

Answer: A



Watch Video Solution

53. Assertion: S.I. unit of atomic mass and molecular mass is kilograms.

Reason : Atomic mass is equal to the mass of 6.023×10^{24} atoms.

- A. If both assertion and reason are true and reason is the correct explanation of assertion
- B. If both assertion and reason are true but reason is not the correct explanation of assertion
- C. If assertion is true but reason is false
- D. If both assertion and reason are false.

Answer: D



Watch Video Solution

54. Assertion : Bond energy and bond dissociation energy have identical value for diatomic molecules.

Reason : Greater the bond dissociation energy, less reactive is the bond.

A. If both assertion and reason are true and reason is the correct explanation of assertion

B. If both assertion and reason are true but reason is not the correct explanation of assertion

C. If assertion is true but reason is false

D. If both assertion and reason are false.

Answer: B



Watch Video Solution

55. Assertion : The degree of complex formation in actinides decreases in the order

: Actinides form complexes with π -bonding ligands such as alkyl phosphines and thioethers.

A. If both assertion and reason are true and reason is the correct explanation of assertion

B. If both assertion and reason are true but reason is not the correct explanation of assertion

C. If assertion is true but reason is false

D. If both assertion and reason are false.

Answer: B





56. Statement-I : Benzene on heating with conc. H_2SO_4 gives benzene sulphonic acid which when heated with superheated steam under pressure gives benzene.

Because

Statement-II : Sulphonation is a reversible process.

- A. If both assertion and reason are true and reason is the correct explanation of assertion
- B. If both assertion and reason are true but reason is not the correct explanation of assertion
- C. If assertion is true but reason is false
- D. If both assertion and reason are false.

Answer: A



Watch Video Solution

57. Assertion : The molality of the solution does not change with change in temp- nature.

: The molality is expressed in units of moles per 1000 g of solvent. Reason

A. If both assertion and reason are true and reason is the correct explanation of assertion

B. If both assertion and reason are true but reason is not the correct explanation of assertion

C. If assertion is true but reason is false

D. If both assertion and reason are false.

Answer: A



Watch Video Solution

58. Assertion : Due to Frenkel defect, density of the crystalline solid decreases.

Reason : In Frenkel defect, cation or anion leaves the crystal.

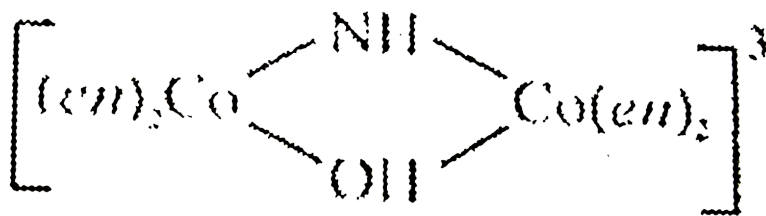
A. If both assertion and reason are true and reason is the correct explanation of assertion

- B. If both assertion and reason are true but reason is not the correct explanation of assertion
- C. If assertion is true but reason is false
- D. If both assertion and reason are false.

Answer: D

 **Watch Video Solution**

59. Assertion :



is named

as tetrakis (ethylene-diammine)

μ – hydroxo – μ – imido dicobalt (III) ion.

Reason : In naming polynuclear complexes i.e., containing two or more metal atoms joined by bridging ligands, the word μ is added with hyphen before the name of such ligands.

- A. If both assertion and reason are true and reason is the correct explanation of assertion
- B. If both assertion and reason are true but reason is not the correct explanation of assertion
- C. If assertion is true but reason is false
- D. If both assertion and reason are false.

Answer: A



60. Assertion : 2,3-Dimethylbut-2-ene is more stable than but-2-ene.

Reason : Six hyperconjugation structures can be written for 2, 3-dimethylbut-2-ene while but-2-ene has twelve.

- A. If both assertion and reason are true and reason is the correct explanation of assertion
- B. If both assertion and reason are true but reason is not the correct explanation of assertion
- C. If assertion is true but reason is false
- D. If both assertion and reason are false.

Answer: C



Watch Video Solution