



CHEMISTRY

BOOKS - AIIMS PREVIOUS YEAR PAPERS

AIIMS 2012

Chemistry

1. Threshold frequency of a metal is $5 \times 10^{13} \text{ s}^{-1}$ upon which $1 \times 10^{14} \text{ s}^{-1}$ frequency light is focused. Then the maximum kinetic energy of emitted electron is

A. 3.3×10^{-21}

B. 3.3×10^{-20}

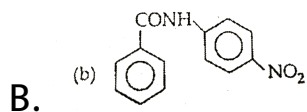
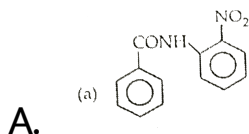
C. 6.6×10^{-21}

D. 6.6×10^{-20}

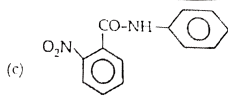
Answer:

 **Watch Video Solution**

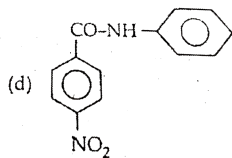
2. Which is the major product formed when $C_6H_5CONHC_6H_5$ undergoes nitration?



C.



D.



Answer:



Watch Video Solution

3. How many $P = S$ bond present in $(HPO_3)_3$?

A. 0

B. 3

C. 6

D. 9

Answer:



Watch Video Solution

4. At equilibrium which is correct :-

A. $\Delta G = 0$

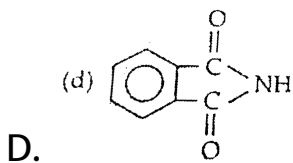
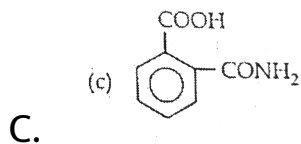
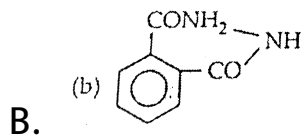
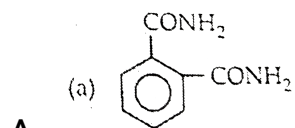
B. $\Delta S = 0$

C. $\Delta H = 0$

D. $\Delta G^\circ = 0$

Answer:

5. If phthalic acid is treated with NH_3 and then it is first heated weakly then strongly, the final product formed is



Answer:



Watch Video Solution

6. In bcc structure contribution of corner and central atom is

A. $\frac{1}{8}, 1$

B. $\frac{1}{4}, \frac{1}{8}$

C. $\frac{1}{8}, \frac{1}{2}$

D. $1, \frac{1}{2}$

Answer:



Watch Video Solution

7. Bond dissociation energy of CH_4 is 360 kJ/mol and C_2H_6 has 620 kJ/mol. Then bond dissociation energy of C-C bond is :-

A. 170 kJ/mol

B. 50 kJ/mol

C. 80 kJ/mol

D. 220 kJ/mol

Answer:



Watch Video Solution

8. For silicon which is not correct?

- A. It is a type of silicate.
- B. It is thermally unstable.
- C. It is hydrophilic.
- D. Repeating unit is R_2SiO .

Answer:

 [Watch Video Solution](#)

9. In bohr's model $\frac{nh}{2\pi}$ shows :-

- A. Momentum

B. Kinetic energy

C. Potential energy

D. Angular momentum

Answer:



Watch Video Solution

10. For a reaction, $r = k(CH_3COCH_3)^{3/2}$ then unit of rate of reaction and rate constant respectively is

A. $\text{mol L}^{-1} \text{s}^{-1}$, $\text{mol}^{-1/2} \text{L}^{1/2} \text{s}^{-1}$

B. $\text{mol}^{-1} \text{L}^{-1} \text{s}^{-1}$, $\text{mol}^{-1/2} \text{L}^{-1/2} \text{s}^{-1}$

C. $\text{mol L}^{-1} \text{s}^{-1}$, $\text{mol}^{+1/2} \text{L}^{1/2} \text{s}^{-1}$

D. mol L s , $\text{mol}^{+1/2} \text{L}^{1/2} \text{s}$

Answer:



Watch Video Solution

11. If Si is doped with B,

A. n-type semiconductor is formed

B. p-type semiconductor is formed

C. insulator is formed

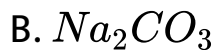
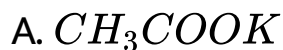
D. polymer is formed.

Answer:



Watch Video Solution

12. Which has the highest pH ?



Answer:



Watch Video Solution

13. Living in the atmosphere of CO is dangerous because it

A. combines with O_2 present inside to form CO_2

B. reduces organic matter of tissues

C. combines with haemoglobin and makes it incapable to absorb oxygen

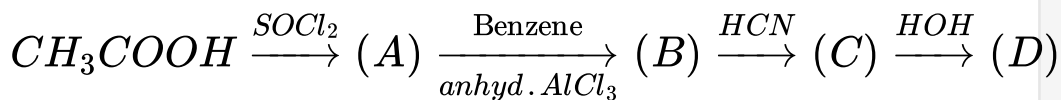
D. dries up the blood.

Answer:

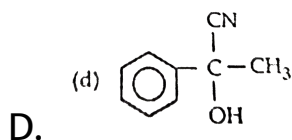
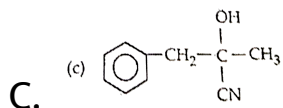
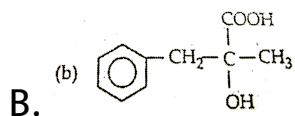
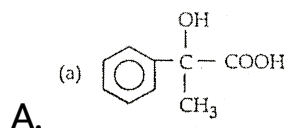


Watch Video Solution

14. A set of reactions yielded a product (D):



The structure of (D) would be:



Answer:

 Watch Video Solution

15. Which of the following is a chiral compound?

A. Hexane

B. n-Butane

C. Methane

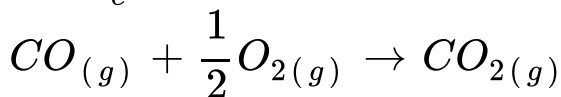
D. 2, 3, 4-Trimethylhexane.

Answer:



Watch Video Solution

16. $\frac{K_p}{K_c}$ for following reaction will be



A. RT

B. $\frac{1}{RT}$

C. $\frac{1}{\sqrt{RT}}$

D. $\frac{RT}{2}$

Answer:



Watch Video Solution

17. If $t_{1/2}$ vs $\frac{1}{a^2}$ is a straight line graph then determine the order of reaction.

A. Zero order

B. First order

C. Second order

D. Third order

Answer:



Watch Video Solution

18. $CsCl$ has *bcc* arrangement and its unit cell edge length is 400 pm. Calculate the interionic distance in $CsCl$.

A. 400 pm

B. 800 pm

C. $\sqrt{3} \times 100$ pm

D. $\frac{\sqrt{3}}{2} \times 400 \text{ pm}$

Answer:



Watch Video Solution

19. A colloidal solution is kept in dark and is illuminated by a beam of light then brightness appears at the right angle of direction of light. This effect is called :-

- A. Tyndall effect
- B. Brownian effect
- C. Hardy-Schulze effect

D. None of these

Answer:



Watch Video Solution

20. MnO_3 in an acidic medium dissociates into

A. MnO_2 and MnO_4^-

B. MnO and MnO_4^-

C. MnO_2 and MnO

D. MnO_2 and MnO_3

Answer:

 Watch Video Solution

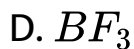
21. Magnetic moment of Cr^{2+} is nearest to



Answer:

 Watch Video Solution

22. The dipole moment is minimum in



Answer:



[Watch Video Solution](#)

23. Number of isomers of C_5H_6

A. 2

B. 3

C. 4

D. 5

Answer:

 [Watch Video Solution](#)

24. At 60° and 1 atm, N_2O_4 is 50% dissociated into NO_2 then K_p is

A. 1.33 atm

B. 2 atm

C. 2.67 atm

D. 3 atm

Answer:



Watch Video Solution

25. pK_a increases in benzoic acid when substituent "x" is bonded at para-position, then "x" is

A. $-COOH$

B. $-NO_2$

C. $-CN$

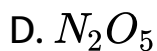
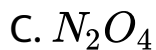
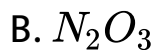
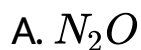
D. $-OCH_3$

Answer:



Watch Video Solution

26. $N - N$ bond length is minimum in



Answer:



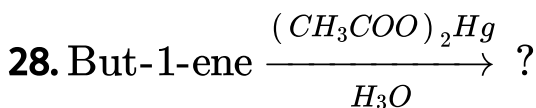
Watch Video Solution

27. Which is correct example of condensation polymer?

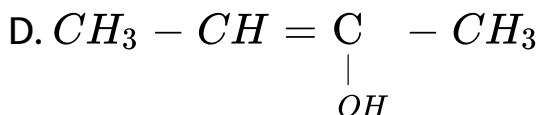
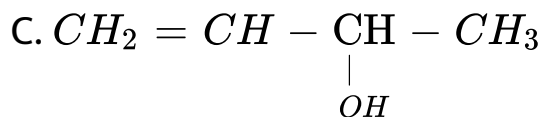
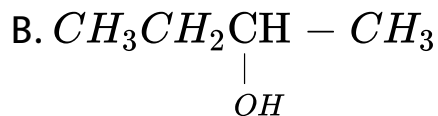
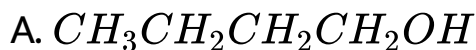
- A. Nylon, Buna-S
- B. Teflon, Buna-N
- C. Nylon6,6 Dacron
- D. Neoprene, Buna-S

Answer:

 [Watch Video Solution](#)



The product in the above reaction is

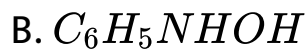


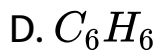
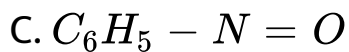
Answer:



Watch Video Solution

29. Nitrobenzene ($PhNO_2$) $\xrightarrow{Zn + NH_4Cl}$ P, P will be

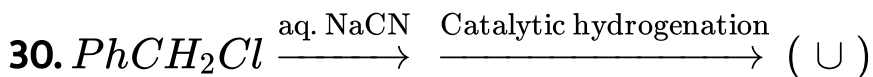




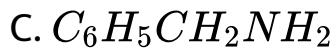
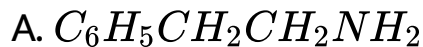
Answer:



Watch Video Solution



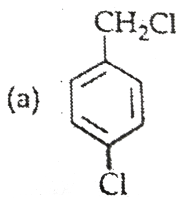
The final product (U) is :



Answer:

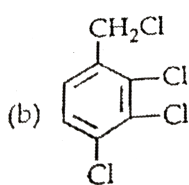
 Watch Video Solution

31. An aromatic compound (A), $C_7H_6Cl_2$ gives $AgCl$ on boiling with alcoholic $AgNO_3$ soln. And yields C_7H_7OCl on treatment with $NaOH$. (A) on oxidation gives a monochlorobenzoic acid which affords only the monoderivative on nitration the compound (A) is

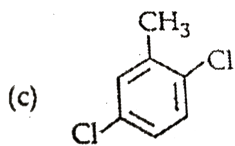


A.

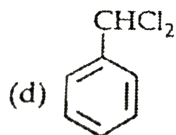
B.



C.



D.



Answer:

 [Watch Video Solution](#)

32. Assertion : Rate of reaction doubles when concentration of reactant is doubled if it is a first

order reaction.

Reason : Rate constant also double.

A. If both assertion and reason are true and reason is the correct explanation of assertion.

B. If both assertion and reason are true but reason is not the correct explanation of assertion.

C. If assertion is true but reason is false

D. If both assertion and reason are false.

Answer:



Watch Video Solution

33. Assertion : Sodium acetate on Kolbe's electrolysis gives methane.

Reason : Methylene free radical is formed at cathode.

A. If both assertion and reason are true and reason is the correct explanation of assertion.

B. If both assertion and reason are true but reason is not the correct explanation of assertion.

C. If assertion is true but reason is false

D. If both assertion and reason are false.

Answer:



Watch Video Solution

34. Assertion : H_3PO_2 has strong reducing property but H_3PO_4 does not.

Reason : $P - OH$ bond present in H_3PO_4 .

- A. If both assertion and reason are true and reason is the correct explanation of assertion.
- B. If both assertion and reason are true but reason is not the correct explanation of assertion.
- C. If assertion is true but reason is false
- D. If both assertion and reason are false.

Answer:





Watch Video Solution

35. Assertion: 1,2-dichloroethane is optically active.

Reason: Meso compounds are optically active.

- A. If both assertion and reason are true and reason is the correct explanation of assertion.
- B. If both assertion and reason are true but reason is not the correct explanation of assertion.
- C. If assertion is true but reason is false
- D. If both assertion and reason are false.

Answer:



watch video solution

36. Assertion : ClF_3 has T-shape structure.

Reason : It has two lone pairs arranged at 180° angle.

- A. If both assertion and reason are true and reason is the correct explanation of assertion.
- B. If both assertion and reason are true but reason is not the correct explanation of assertion.
- C. If assertion is true but reason is false
- D. If both assertion and reason are false.

Answer:



37. Assertion : O_2 is paramagnetic.

Reason : It has one unpaired electron.

- A. If both assertion and reason are true and reason is the correct explanation of assertion.
- B. If both assertion and reason are true but reason is not the correct explanation of assertion.
- C. If assertion is true but reason is false
- D. If both assertion and reason are false.

Answer:



Watch Video Solution

38. Phenol is more reactive than benzene towards electrophilic substitution reaction.

In case of Phenol, the intermediate carbocation is more resonance stabilised.

- A. If both assertion and reason are true and reason is the correct explanation of assertion.
- B. If both assertion and reason are true but reason is not the correct explanation of assertion.
- C. If assertion is true but reason is false
- D. If both assertion and reason are false.

Answer:



Watch Video Solution

39. Assertion : Fluorine is a stronger oxidizing agent than iodine.

Reason : Fluorine has greater electronegativity than iodine.

A. If both assertion and reason are true and reason is the correct explanation of assertion.

B. If both assertion and reason are true but reason is not the correct explanation of assertion.

C. If assertion is true but reason is false

D. If both assertion and reason are false.

Answer:



Watch Video Solution

40. Assertion: Ce^{4+} is used as an oxidising agent in volumetric analysis.

Reason: Ce^{4+} has the tendency to attain +3 oxidation state.

A. If both assertion and reason are true and reason is the correct explanation of assertion.

- B. If both assertion and reason are true but reason is not the correct explanation of assertion.
- C. If assertion is true but reason is false
- D. If both assertion and reason are false.

Answer:



Watch Video Solution

41. Assertion : The spectrum of He^+ is expected to be similar to that of hydrogen.

Reason : He^+ is also one electron system.

A. If both assertion and reason are true and reason is the correct explanation of assertion.

B. If both assertion and reason are true but reason is not the correct explanation of assertion.

C. If assertion is true but reason is false

D. If both assertion and reason are false.

Answer:

 [Watch Video Solution](#)

42. Assertion: Cl_2 gas bleaches the articles permanently.

Reason: Cl_2 is a strong reducing agent.

- A. If both assertion and reason are true and reason is the correct explanation of assertion.
- B. If both assertion and reason are true but reason is not the correct explanation of assertion.
- C. If assertion is true but reason is false
- D. If both assertion and reason are false.

Answer:



Watch Video Solution

43. Statement I $[Fe(H_2O)_5NO]SO_4$ is paramagnetic
Statement II The Fe in $[Fe(H_2O)_5NO]SO_4$ has three unpaired electrons .

- A. If both assertion and reason are true and reason is the correct explanation of assertion.
- B. If both assertion and reason are true but reason is not the correct explanation of assertion.
- C. If assertion is true but reason is false
- D. If both assertion and reason are false.

Answer:



Watch Video Solution

44. Assertion : The solubility of a gas in a liquid increases with increase of pressure.

Reason : The solubility of a gas in a liquid is directly proportional to the pressure of the gas.

- A. If both assertion and reason are true and reason is the correct explanation of assertion.
- B. If both assertion and reason are true but reason is not the correct explanation of assertion.
- C. If assertion is true but reason is false
- D. If both assertion and reason are false.

Answer:



Watch Video Solution

45. Assertion: In a pressure cooker the water is brought to boil. The cooker is then removed from the stove. Now on removing the lid the pressure cooker, the water starts boiling again.

Reason: The impurities in water bring down its boiling point.

A. If both assertion and reason are true and reason is the correct explanation of assertion.

B. If both assertion and reason are true but reason is not the correct explanation of assertion.

C. If assertion is true but reason is false

D. If both assertion and reason are false.

Answer:



Watch Video Solution