



PHYSICS

BOOKS - AIIMS PREVIOUS YEAR PAPERS

AIIMS 1999

Physics

1. A metal rod of length L is clamped at a distance $L/4$ from one end. It is set into

longitudinal vibrations by pulling on length - wise a resin cover cloth piece . The wavelength for fundamental mode of vibrations will be

A. $L/4$

B. $3L/4$

C. L

D. $L/2$

Answer: C



View Text Solution

2. A thin equiconvex lens has focal length 10 cm and refractive index 1.5 . One of its faces is now silvered and for an object placed at a distance u in front of it, the image coincides with the object. The value of u is

A. 20 cm

B. 10 cm

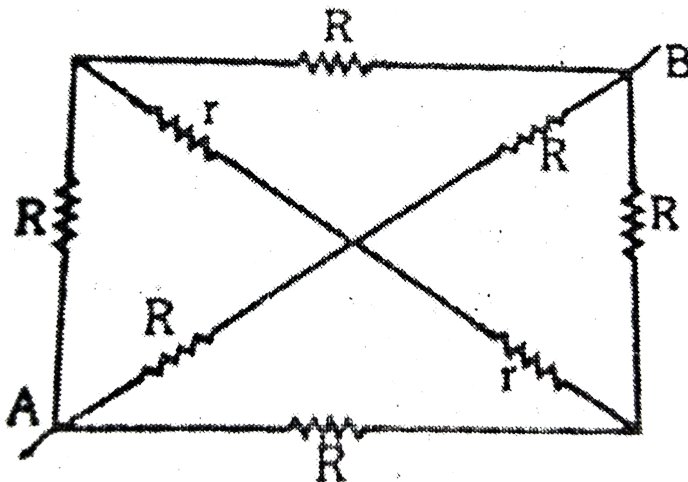
C. 5 cm

D. 20 cm

Answer: C



3. Six resistors each of resistance R and two resistors each of resistance r are connected in the network shown below. The equivalent resistance between A and B is



A. $3R+r$

B. $6R+2r$

C. $2R/3$

D. $\frac{R}{3} + \frac{r}{3}$

Answer: C



Watch Video Solution

4. The radius of a circular loop is r and a current i is flowing in it. The equivalent magnetic moment will be

A. $\pi r^2 i$

B. ir

C. $2\pi ir$

D. $\frac{i}{r^2}$

Answer: A



Watch Video Solution

5. Power factor in a series R-L-C resonant circuit is

A. 0.5

B. 0.707

C. 1

D. 0

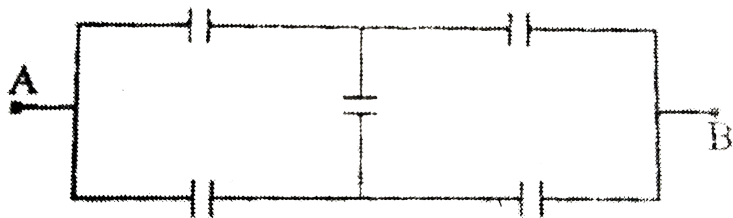
Answer: C



Watch Video Solution

6. In the network given below all the five capacitors have the same capacitance C each .
Then the capacitance between the terminal A

and B will be



A. $\frac{C}{5}$

B. $5C$

C. C

D. $\frac{5}{2}C$

Answer: C



Watch Video Solution

7. The stationary wave produced in a stretched string is given by

$$Y = A \cos\left(\frac{2\pi x}{\lambda}\right) \sin\left(\frac{2\pi t}{T}\right)$$

The corresponding progressing wave has an amplitude equal to

A. $A/2$

B. A

C. $2A$

D. $A / \sqrt{2}$

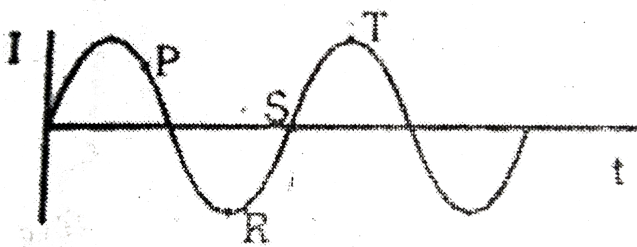
Answer: A



Watch Video Solution

8. A sinusoidal a.c. flows in an inductor as shown in the given below :-

Then the p.d. across the inductor is a maximum at the instant indicated on the graph by the point.



A. S

B. P

C. R

D. T

Answer: A



Watch Video Solution

9. Which of the following relations between weber, second, ampere and volt be correct ?

A. $\text{weber/second} = \text{volt}$

B. weber x second = volt

C. weber/second = ampere

D. weber x second = ampere

Answer: A



Watch Video Solution

10. A circular coil of radius R carries a current in it. The magnetic field along its axis decreases as we move away from its centre.

The space rate of fall of this field is constant at distance equal to

A. $2R$

B. R

C. $3R$

D. $R/2$

Answer: D



View Text Solution

11. A soap film is formed on a wire ring held vertically and allowed to drain. A diffuse source of white light is observed by reflection in the soap film . In this connection indicate the wrong statement :

A. The colours are due to refraction of light by the wedge-shaped film

B. The thickness of the film is of the same order as the wavelength of visible light

C. The band of colours move downwards as
the film drains

D. Just before the film breaks, it may appear
black at the top

Answer: A



View Text Solution

12. The specific charge of an electron is

A. 5.7×10^7 coulomb/kg

B. 1.76×10^{11} coulomb/kg

C. 1.6×10^{-19} coulomb/gm

D. 1.6×10^{-19} coulomb

Answer: B



Watch Video Solution

13. Vectors $3\vec{i} - 2\vec{j} + \vec{k}$ and $2\vec{i} + 6\vec{j} + m\vec{k}$

will be perpendicular to each other if

A. $m=8$

B. $m=6$

C. $m=3$

D. $m=1$

Answer: B



Watch Video Solution

14. Newton - second is the unit of

A. energy

B. momentum

C. angular momentum

D. velocity

Answer: B



Watch Video Solution

15. In the S.I. system, the unit of energy is-

A. electron - volt

B. joule

C. calorie

D. erg

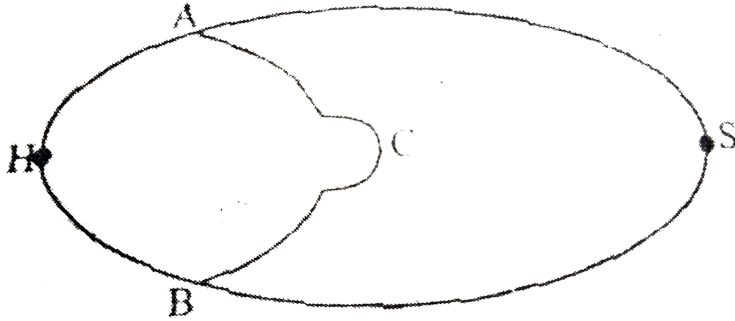
Answer: B



Watch Video Solution

16. Two rods of the same length L but cross-section in the ratio $S_B / S_A = 4$ are joined at a heater H and a heat sink S as shown. The rate of heat flow to s is found to be R_o . If points of A and B at distance $L/3$ each from H are now joined by a conductor C of length L and the

cross-section of C is such that $3c=2S/A$, the new rate of heat flow to S will be (See figure)



A. $\frac{6}{5}R_o$

B. $\frac{13}{12}R_o$

C. R_o

D. $\frac{7}{5}R_o$

Answer: C

 [View Text Solution](#)

17. Most of the comets moving round the sun have orbits of the shape of

- A. a hyperbola
- B. a parabola
- C. an elongated ellipse
- D. a circle

Answer: C

 [Watch Video Solution](#)

18. Kirchoff's laws are applicable to

A. A.C. only

B. D.C . Only

C. Both (a) and (b)

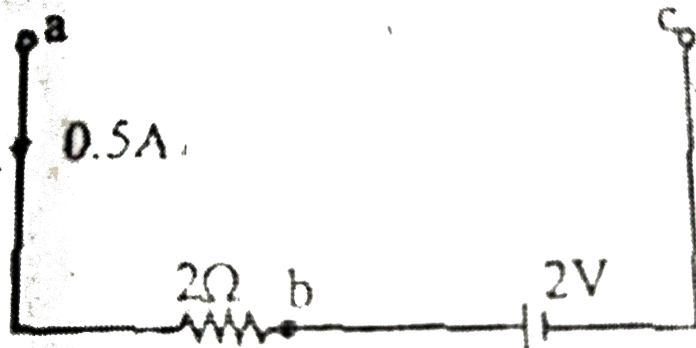
D. Intermittant currents only

Answer: C



Watch Video Solution

19. In the given diagram, a current of 0.5 A is caused to pass through a resistance as shown. The emf of the cell is 2V, and its internal resistance is zero. Indicate the wrong statement:



- A. the p.d. between a and c is 1.0 V
- B. the p.d. between a and b is 1.0 V

C. b is at a higher potential than c

D. a is at a higher potential than c

Answer: A



Watch Video Solution

20. In LCR circuit if $\frac{1}{LC} > \frac{R^2}{4L^2}$, the circuit is

A. oscillatory

B. dead beat

C. critically damped

D. none of the above

Answer: A



Watch Video Solution

21. To use a transistor as an amplifier

A. the emitter base junction is forward biased and collector -base junction is reverse biased

B. both junctions are reverse biased

C. both junctions are forward biased

D. it does not matter how the transistor is biased, It always works as an amplifier

Answer: A



Watch Video Solution

22. An oscilloscope measures the

A. Peak to peak value of AC voltage

B. RMS value of AC voltage

C. D.C. value of a voltage

D. None of the above.

Answer: A



Watch Video Solution

23. De Broglie wavelength λ is proportional to

A. $\frac{1}{\sqrt{E}}$ for photons and $1/E$ for particles

B. $1/E$ for photons and $\frac{1}{\sqrt{E}}$ for particles

C. $1/E$ for both photons and particles in motion

D. $\frac{1}{\sqrt{E}}$ for both photons and particles.

Answer: B



Watch Video Solution

24. A given semiconductor has electron concentration of 8×10^{13} per cm^3 and a hole concentration of 5×10^{12} per cm^3 . What is the resistivity of this sample if the electron

mobility is $23,000 \text{ cm}^2/\text{V}$ and hole mobility is $100 \text{ cm}^2/\text{V}$?

A. $3.395 \times 10^{-4} \text{ ohm x cm}$

B. 3.395 ohm x cm

C. $5 \times 10^{-6} \text{ ohm x cm}$

D. $45 \times 10^{-6} \text{ ohm x cm}$

Answer: B



View Text Solution

25. What angle θ to the horizon will be formed by the surface of petrol in the tank of a motor car moving horizontally with a constant acceleration of 2.44 m/s^2 ?

A. $\theta = 14^\circ$

B. $\theta = 45^\circ$

C. $\theta = 30^\circ$

D. $\theta = 0$

Answer: A



View Text Solution

26. Unit of "Pascal " is the same as

A. 10^6 dyne/cm^2

B. 1 poundal/inch^2

C. 1 newton/metre^2

D. 1 dyne/cm^2

Answer: C



View Text Solution

27. A car accelerates from rest at a constant rate for some time after which it decelerates at a constant rate β to come to rest. If the total time elapsed is t , the maximum velocity acquired by the car is given by :

A. $\frac{ab}{(a + b)}t$

B. $\frac{ab}{(a - b)}t$

C. $\frac{at^2}{(a + b)}$

D. $\frac{tb^2}{(a + b)}$

Answer: B

28. A narrow bent tube open at both ends is lowered from a bridge over a stream into the stream as shown in the figure. Water rises in the tube to a height of 15 cm above water level . The speed of water current must be



A. 1.7 metre/sec

B. 1.5 cm/sec

C. 1.2 cm/sec

D. 15 cm/sec

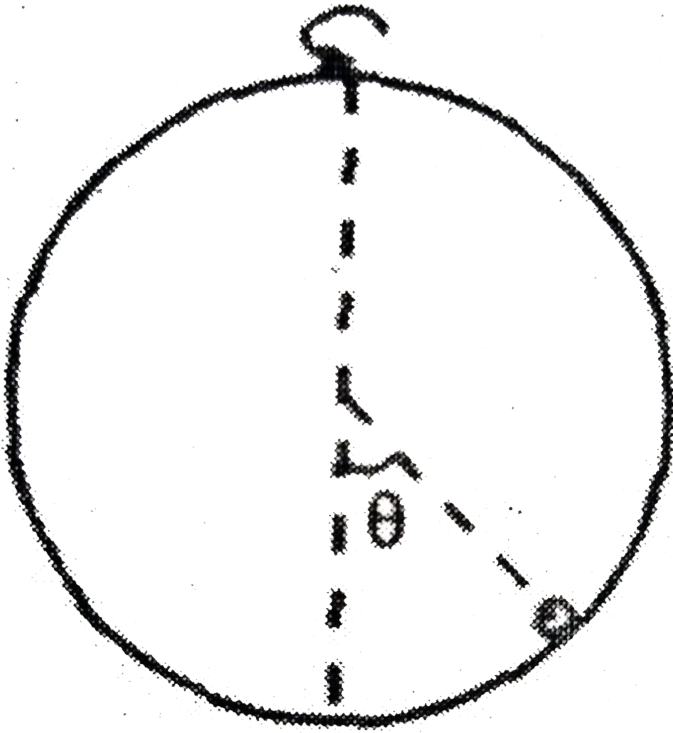
Answer: A



View Text Solution

29. A spherical bowl of radius R rotates about the vertical diameter with angular velocity ω . The bowl contains a small object inside and in absence of friction, this object takes up a position inside the bowl such that its radius vector makes an angle θ with the vertical (see

figure). Then



A. $\omega = \sqrt{g/r \cos \theta}$

B. $\omega = 2\pi g/r$

C. $\omega = \sqrt{\frac{g \cos \theta}{r}}$

$$D. \omega = \sqrt{r \cos \theta \times g}$$

Answer: A



View Text Solution

30. A dry clean steel needle of diameter d and density ρ when carefully placed on the surface of water remains floating . If T is the surface tension of water , then maximum value for the diameter d of the needle for enabling it to float will be

$$\text{A. } d = \sqrt{\frac{8\rho\pi}{Tg}}$$

$$\text{B. } d = \sqrt{\frac{4\rho\pi}{Tg}}$$

$$\text{C. } d = \sqrt{\frac{8T}{\rho\pi g}}$$

D. data incomplete

Answer: C



Watch Video Solution

31. In SHM with amplitude a , the potential energy and kinetic energy are equal to each

other as displacement

A. $a / \sqrt{2}$

B. $a/4$

C. $a/3$

D. $a/2$

Answer: A



Watch Video Solution

32. The acceleration of a particle starting from rest, varies with time according to the relation $a = kt + c$. The velocity of the particle after time t will be :

A. $kt^2 + \frac{1}{2}ct$

B. $\frac{1}{2}kt^2 + ct$

C. $\frac{1}{2}(kt^2 + c)$

D. $kt^2 + ct$

Answer: B



Watch Video Solution

33. A particle simultaneously participates in two mutually perpendicular oscillations , $x=2 \sin \omega t$, $y =2 \cos \omega t$. The trajectory of motion will be

- A. a straight line
- B. a parabola
- C. a circle
- D. none of these

Answer: C



Watch Video Solution

34. A piano string $1.5m$ long is made of steel of density $7.7 \times 10^3 kg/m^3$ and $\gamma = 2 \times 10^{11} N/m^2$. It is maintained at a tension which produces an elastic strain of 1% in the string. What is the fundamental frequency of transverse vibration of the string ?

A. 256 Hz

B. 178Hz

C. 170Hz

D. 200Hz.

Answer: B



Watch Video Solution

35. Indicate the only correct statement In the following

A. The maximum amount of heat that can be converted into mechanical energy is 100%

B. The maximum amount of mechanical energy that can be converted into heat is 100 %

C. By opening the door of a working refrigerator in a room, you can cool the surrounding air

D. In an adiabatic expansion of a gas, the product of pressure and volume increases

Answer: B



View Text Solution

36. Two gases O_2 and H_2 are at the same temperature . If E_o is the average kinetic energy of a molecule of oxygen sample , and

E_H is the average kinetic energy of a molecule of hydrogen sample , then

A. $E_o = \frac{1}{16} E_H$

B. $E_o = 16E_H$

C. $E_o > E_H$

D. $E_o = E_H$

Answer: D



View Text Solution

37. Which one of the following is not a "Black-body" ?

- A. A highly polished black car
- B. Uniform temperature enclosure
- C. Platinum black
- D. The sun.

Answer: A



Watch Video Solution

38. A beam of monochromatic light of wavelength λ is reflected from air into water to refractive index $4/3$. The wavelength of light beam inside water will be

A. $\frac{9}{16} \times \lambda$

B. $3\lambda/4$

C. $\lambda \times \frac{4}{3}$

D. λ

Answer: B



View Text Solution

39. Four perfect polarising plates are stacked so that the axis of each is turned 30° clockwise to the preceding plate, the last plate therefore being crossed with the first. A beam of unpolarised light of intensity 1 passes through the stack perpendicularly. The transmitted beam has intensity

A. $\frac{27}{128} I$

B. $\frac{81}{256} I$

C. $\frac{1}{8} I$

D. $\frac{27}{64}$ |

Answer: A



View Text Solution

40. Two sounds in a gas differ in their loudness level by 20 db. What is the ratio of the amplitudes of the pressure oscillations ?

A. 10 : 1

B. 10^4 : 1

C. $\sqrt{10}:1$

D. 100:1

Answer: A



View Text Solution

41. Speed of Electro Magnetic wave depends

A. only upon the electric properties of the
medium

B. only upon the magnetic properties of
the medium

C. both upon the electric and magnetic
properties of the medium

D. mechanical and thermal properties of
the medium:

Answer: C



View Text Solution

42. If μ_o represents the magnetic permeability constant in free space and Σ_o is the permittivity in vacuum, and C the speed of light in vacuum, then

A. $\Sigma_o = \sqrt{\mu_o C}$

B. $\Sigma_o^{-2} = \mu_o C^{-1}$

C. $\Sigma_o^{-1} = \mu_o^{-1} C^{-2}$

D. $\Sigma_o = \mu_o^{-1} C^{-2}$

Answer: D



Watch Video Solution

43. In a nuclear reactor.

A. the thick concrete shield is used to slow down the speed of neutrons

B. heavy water or graphite is used to moderate the activity of the reactor

C. the chain reaction is controlled by rods of uranium whose going in reduces the rate

D. out of U^{238} and U^{235} , the natural uranium has less than 1% of dU^{235}

Answer: D



Watch Video Solution

44. In a hot wire ammeter the deflection angle θ of the pointer is related with the current I as

A. $I\alpha\theta^2$

B. $I\alpha\sqrt{\theta}$

C. $I\alpha \tan \theta$

D. $I\alpha\theta$

Answer: B



View Text Solution

45. Television signals reach us only through ground waves. The range R is related to the height h of the transmitter antenna as

A. $R\alpha h^{1/3}$

B. $R\alpha h^{1/2}$

C. $R\alpha h^2$

D. $R\alpha h$

Answer: B



Watch Video Solution

46. Which energy state of triply ionized beryllium (Be^{+3}) has the same orbital radius as that of state of hydrogen atom

A. $n = 8$ state

B. $n = 5$ state

C. $n = 4$ state

D. $n = 2$ state.

Answer: D

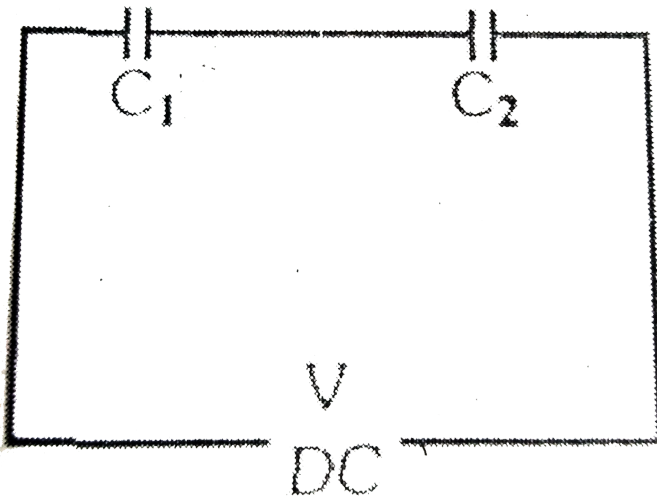


View Text Solution

47. A Capacitor of capacitance $C_1 = 1\mu F$ can withstand a maximum voltage $V_1 = 6.0$ KV while another capacitor of capacitance $C_2 = 2.0\mu F$

withstands the maximum voltage $V_2=4.0$ KV .

What maximum will the system of these two capacitance withstand when connected in series as shown below .



A. 5.0 KV

B. 9.0 KV

C. 2.0 KV

D. 10.0 KV

Answer: B



View Text Solution

48. A battery is connected across a resistance wire of uniform cross-section . If another resistance wire is connected in parallel, then the intensity of electric field in the first wire will

A. be halved

B. be doubled

C. become zero

D. remain unchanged

Answer: D



Watch Video Solution

49. Transistor is a

A. current operated device

B. voltage operated device

C. both current and voltage operated device

D. none of the above.

Answer: A



View Text Solution

50. Satisfactory explanation of the phenomenon of photo electric effect is based on

- A. Planck's quantum theory
- B. Einstein's theory of relativity
- C. Huygen's wave theory
- D. Newton's corpuscular theory.

Answer: A



View Text Solution

51. Assertion A pulsar is a source of radio waves that varies in intensity at regular

intervals

Reason A pulsar is a rotating neutron star

A. Both Assertion and Reason are true and

Reason is the correct explanation of

Assertion

B. Both Assertion and Reason are true but

Reason is not a correct explanation of

Assertion

C. Assertion is true but Reason is false

D. Assertion is false but Reason is true

Answer: A



View Text Solution

52. Radioactivity of 10^8 undecayed radioactive nuclei of half life of 50 days is equal to that of 1.2×10^8 number of undecayed nuclei of some material with half life of 60 days

Radioactivity is proportional to half-life.

A. Both Assertion and Reason are true and

Reason is the correct explanation of

Assertion

B. Both Assertion and Reason are true but

Reason is not a correct explanation of

Assertion

C. Assertion is true but Reason is false

D. Assertion is false but Reason is true

Answer: C



Watch Video Solution

53. Assertion : A laser beam $0.2W$ power can drill holes through a metal sheet, whereas $1000W$ torch-light cannot.

Reason : The frequency of laser light is much higher than that of torch light.

A. Both Assertion and Reason are true and Reason is the correct explanation of Assertion

B. Both Assertion and Reason are true but Reason is not a correct explanation of

Assertion

C. Assertion is true but Reason is false

D. Assertion is false but Reason is true

Answer: C



Watch Video Solution

54. Assertion : In a radioactive disintegration, an electron is emitted by the nucleus.

Reason : Electrons are always present inside the nucleus.

- A. Both Assertion and Reason are true and Reason is the correct explanation of Assertion
- B. Both Assertion and Reason are true but Reason is not a correct explanation of Assertion
- C. Assertion is true but Reason is false
- D. Assertion is false but Reason is true

Answer: A



Watch Video Solution

55. Assertion:We always see the same face of the moon

Reason : The period of rotation of the moon about its axis and its period of revolution about the earth are equal

A. Both Assertion and Reason are true and

Reason is the correct explanation of

Assertion

B. Both Assertion and Reason are true but Reason is not a correct explanation of Assertion

C. Assertion is true but Reason is false

D. Assertion is false but Reason is true

Answer: A



View Text Solution

56. Assertion: In an electric bulb, the filament is in the form of a coiled coil

Reason: A coiled coil filament occupies less space and is therefore not cooled significantly by the convection currents in the bulb

A. Both Assertion and Reason are true and Reason is the correct explanation of Assertion

B. Both Assertion and Reason are true but Reason is not a correct explanation of

Assertion

C. Assertion is true but Reason is false

D. Assertion is false but Reason is true

Answer: A



Watch Video Solution

57. Assertion: Wood is a bad conductor of electricity

Reason: Wood has a large number of free electrons

- A. Both Assertion and Reason are true and Reason is the correct explanation of Assertion
- B. Both Assertion and Reason are true but Reason is not a correct explanation of Assertion
- C. Assertion is true but Reason is false
- D. Assertion is false but Reason is true

Answer: C



Watch Video Solution

58. Assertion:A sail boat cannot be propelled by air blown at the sail from a big fan attached to the boat

Reason:Action of the air from the fan and reaction of the sail, both act on the boat

A. Both Assertion and Reason are true and

Reason is the correct explanation of

Assertion

B. Both Assertion and Reason are true but Reason is not a correct explanation of Assertion

C. Assertion is true but Reason is false

D. Assertion is false but Reason is true

Answer: A



View Text Solution

59. Assertion: Cooling inside a refrigerator is not proper when a thick layer of ice deposits on the freezer .

Reason : Ice is a bad conductor of heat

A. Both Assertion and Reason are true and

Reason is the correct explanation of

Assertion

B. Both Assertion and Reason are true but

Reason is not a correct explanation of

Assertion

C. Assertion is true but Reason is false

D. Assertion is false but Reason is true

Answer: A



Watch Video Solution

60. Assertion: Even a small bird hitting a flying aeroplane can cause heavy damage to it

Reason: The bird imparts a large impulse and a large force during the short time of impact

- A. Both Assertion and Reason are true and Reason is the correct explanation of Assertion
- B. Both Assertion and Reason are true but Reason is not a correct explanation of Assertion
- C. Assertion is true but Reason is false
- D. Assertion is false but Reason is true

Answer: A



Watch Video Solution

