



## CHEMISTRY

### BOOKS - GRB CHEMISTRY (HINGLISH)

## ATOMIC STRUCTURE

### straight objective

1. When a gold sheet is bombarded by a beam of  $\alpha$ - particle , only a few of them get deflected whereas most go straight , undeflected . This is because:

A. The force of attraction exerted on the  $\alpha$  - particle by the oppositely charged electrons is not sufficient .

B. A nucleus has much smaller volume than that of atom .

C. The force of repulsion acting on the fast moving  $\alpha$ -particle is very small.

D. The neutrons in the nucleus do not have any effect on the  $\alpha$  - particles.

**Answer: B**

 [Watch Video Solution](#)

2. Which of the following statements is incorrect for anode rays?

A. They are deflected by electric and magnetic fields.

B. Their  $e/m$  ratio depends on the gas in the discharge tube used to produce the anode rays.

C. The  $e/m$  ratio of anode rays is constant.

D. They are produced by the ionization of the gas in the discharge tube.



**Answer: C**



[Watch Video Solution](#)

3. Rutherford's  $\alpha$ -particle scattering experiment led to the conclusion that :

- A. Mass and energy are related
- B. The mass and the positive charge of an atom are concentrated in the nucleus
- C. Neutrons are present in the nucleus
- D. Atoms are electrically neutral

**Answer: B**



[Watch Video Solution](#)

4. The radius of  $Al_{23}^{27}$  nucleus will be :

A.  $1.2 \times 10^{-15}m$

B.  $27 \times 10^{-15}m$

C.  $10.8 \times 10^{-15}m$

D.  $3.6 \times 10^{-15}m$

**Answer: D**

 [Watch Video Solution](#)

5. Rutherford's scattering experiment, which established the nuclear model of the atom, used a beam of

A.  $\beta$ -particle , which impinged on a metal foil and get absorbed.

B.  $\gamma$ -rays , which impinged on a metal foil and ejected electron.

C. Helium atoms , which impinged on a metal foil and got scattered .

D. Helium nuclei , which impinged on a metal foil and got scattered .

**Answer: D**

 [Watch Video Solution](#)

6. Which of the following options is not correct regarding the order of the frequency of electromagnetic radiation?

- A. Radio waves < Microwaves < X-rays
- B. Green light < UV light <  $\gamma$ -radiations
- C. Far infrared > Radio waves > Cosmic rays
- D. Microwaves < Near infrared rays < UV rays

**Answer: C**

 [Watch Video Solution](#)

7. Identify the option which is correct w.r.t structure of an atom .

- A. As per Rutherford model if number of particles deviated by an angle of  $60^\circ$  is  $x$  then those deviated by  $90^\circ$  will be  $\sqrt{2}x$ .

- B. Specific charge of a particle projected towards the nucleus of atomic number 29 having a closest distance of approach is  $2.9\text{\AA}$  is  $\frac{10^8}{18}$  C/kg if it is projected at an initial speed of  $4 \times 10^4$ .
- C. In the Millikan's oil drop experiment of determining charge on the cathode ray particle,  $4.8 \times 10^{-19}$  C cannot be obtained as the charge on the oil drop.
- D. An  $\alpha$ -particle projected closer to the center of the atom will experience a lesser deviation as compared to the particle projected away from the center.

**Answer: B**



[Watch Video Solution](#)

8. What will be the ratio of volume of  ${}_{13}\text{Al}^{27}$  nucleus to that of  ${}_{11}\text{Na}^{23}$ ?

A. 1.055

B. 1.174

C. Density of atoms should be known for calculations

D. 1

**Answer: B**



[Watch Video Solution](#)

9. An  $\alpha$ -particle accelerated through  $V$  volt is fired towards a nucleus . Its distance of closest approach is  $r$  . If a proton accelerated through the same potential is fired towards the same nucleus , the distance of closest approach of the proton will be :

A.  $r$

B.  $2r$

C.  $\frac{r}{2}$

D.  $\frac{r}{4}$

**Answer: A**



**Watch Video Solution**

**10.** The fraction of volume occupied by the nucleus with respect to the total volume of an atom is.

A.  $10^{-15}$

B.  $10^{-5}$

C.  $10^{-30}$

D.  $10^{-10}$

**Answer: A**



**Watch Video Solution**

**11.** The approximate size of the nucleus of  ${}_{28}^{64}\text{Ni}$  is :

A. 3 fm

B. 4 fm

C. 5 fm

D. 2 fm

**Answer: C**

 [Watch Video Solution](#)

**12. Which of the following statement is incorrect ?**

A.  $\frac{e}{m}$  ratio for canal rays is maximum for hydrogen.

B.  $\frac{e}{m}$  ratio for cathode rays is independent of the gas taken .

C. The nature of canal rays is dependent on electrode material .

D. The nature of canal rays is dependent on the gas taken .

**Answer: C**

 [Watch Video Solution](#)

13. The increasing order (lowest first) for the values of  $q/m$  (charge/mass) for electrons (e), proton (p), neutron (n) and alpha particles ( $\alpha$ ) is :

A. e,p,n,  $\alpha$

B. n,p,e, $\alpha$

C. n,p,  $\alpha$ , e

D. n,  $\alpha$ , p, e

**Answer: D**



[Watch Video Solution](#)

14. To whom is the discovery of the nuclear atom attributed ?

A. Neils Bohr

B. Louis de Broglie

C. Robert Millikan



D. Ernest Rutherford

**Answer: D**



[Watch Video Solution](#)

**15.** Ernest Rutherford's scattering experiment demonstrated the existence of:

A. alpha particle

B. neutron

C. electron

D. nucleus

**Answer: D**



[Watch Video Solution](#)

16. Imagine that in any atom about 50 % of the space is occupied by the atomic nucleus . If a silver foil is bombarded with  $\alpha$  - particles , majority of the  $\alpha$  -particles would :

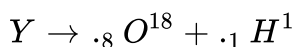
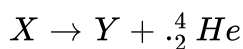
- A. get scattered
- B. be absorbed by the nuclei
- C. pass through the foil undetected
- D. get converted into photons

**Answer: A**



[Watch Video Solution](#)

17. Consider the following nuclear reactions involving X and Y.



If both neutrons as well as protons in both the sides are conserved in nuclear reaction then moles of neutrons in 4.6 g of X :

A.  $2.4N_A$

B. 2.4

C. 4.6

D.  $0.2N_A$

**Answer: B**

 [Watch Video Solution](#)

(i),  ${}_{26}Fe^{54}$ ,  ${}_{26}Fe^{56}$ ,  ${}_{26}Fe^{57}$ ,  ${}_{26}Fe^{58}$  (a) Isotopes

(ii),  ${}_1H^3$ ,  ${}_2H^3$  (b) Isotones

18. (iii),  ${}_{32}Ge^{76}$ ,  ${}_{33}As^{77}$  (c) Isodiaphers

(iv),  ${}_{92}U^{235}$ ,  ${}_{90}Th^{231}$  (d) Isobars

(v),  ${}_1H^1$ ,  ${}_1D^2$ ,  ${}_1T^3$

Match the above correct terms :

A. [(i) - (a)] , [(ii) - (d)] , [(iii) - (b)] , [(iv) - (c)] , [(v) - (a)]

B. [(i) - (a)] , [(ii) - (d)] , [(iii) - (d)] , [(iv) - (c)] , [(v) - (a)]

C. [(v) - (a)] , [(iv) - (c)] , [(iii) - (d)] , [(ii) - (b)] , [(i) - (a)]

D. None of these

**Answer: A**



[Watch Video Solution](#)

## Planck's Theory

1. A photon of 300 nm is absorbed by a gas and then emits two photons. One photon has a wavelength of 496 nm then the wavelength of second photon in nm is :

A. 759

B. 859

C. 959

D. 659

**Answer: A**



[Watch Video Solution](#)

2. The energy required to remove an electron from metal X is  $E = 3.31 \times 10^{-20} \text{ J}$ . Calculate the maximum wavelength of light that can be photoeject an electron from metal X :

A.  $4\mu\text{m}$

B.  $6\mu\text{m}$

C.  $7\mu\text{m}$

D.  $5\mu\text{m}$

**Answer: B**



**Watch Video Solution**

3. Photon having wavelength 310 nm is used to break the bond of  $A_2$  molecule having bond energy  $288 \text{ kJ mol}^{-1}$  then % of energy of photon converted to the KE is :

[ $hc = 12400 \text{ eV}\text{\AA}$  ,  $1 \text{ eV} = 96 \text{ kJ/mol}$ ]

A. 25

B. 50

C. 75

D. 80

**Answer: A**



**Watch Video Solution**

4. A bulb of 40 W is producing a light of wavelength 620 nm with 80 % of efficiency , then the number of photons emitted by the bulb in 20 seconds are :

( $1eV = 1.6 \times 10^{-19} J$ ,  $hc = 12400eV$ )

A.  $2 \times 10^{18}$

B.  $10^{18}$

C.  $10^{21}$

D.  $2 \times 10^{21}$

**Answer: D**



**Watch Video Solution**

5. A certain dye absorbs light of  $\lambda = 4000\text{\AA}$  and then fluoresces light of  $\lambda = 5000\text{\AA}$ . Assuming that under given conditions 50 % of the absorbed energy is re-emitted out as fluorescence, calculate the ratio of the number of quanta emitted out to the number of quanta absorbed :

A.  $\frac{5}{8}$

B.  $\frac{8}{5}$

C.  $\frac{3}{8}$

D.  $\frac{8}{3}$

**Answer: A**



**Watch Video Solution**

6. The ratio of the energy of a photon of wavelength  $3000\text{\AA}$  to that of photon of wavelength  $6000\text{\AA}$  is :

A.  $\frac{1}{2}$

B. 2

C. 3

D.  $\frac{1}{3}$

**Answer: B**



[Watch Video Solution](#)

7. An Electromagnetic radiation of wavelength  $242\text{ nm}$  is just sufficient to ionise a sodium atom .Calculate the ionisation energy of sodium in  $\text{KJmol}^{-1}$ .

A.  $494.5\text{Jmol}^{-1}$

B.  $494.5\text{kJmol}^{-1}$



C.  $494.5 \text{ cal mol}^{-1}$

D.  $600.5 \text{ kJ mol}^{-1}$

**Answer: B**



[Watch Video Solution](#)

8. The wavelength of the electron emitted by a metal sheet of work function 5 eV when photons from EMR of wavelength 62 nm strike the metal plate .

A.  $82.667 \text{ \AA}$

B. 3.16 nm

C. 0.316 nm

D.  $826.67 \text{ \AA}$

**Answer: C**



[Watch Video Solution](#)

9. Photoelectric emission is observed from a surface for frequencies  $\nu_1$  and  $\nu_2$  of the incident radiation ( $\nu_1 > \nu_2$ ). If maximum kinetic energies of the photo electrons in the two cases are in the ratio  $1:K$ , then the threshold frequency is given by:

A.  $\frac{\nu_2 - \nu_1}{K - 1}$

B.  $\frac{K\nu_2 - \nu_1}{K - 1}$

C.  $\frac{K\nu_2 - \nu_1}{K}$

D.  $\frac{K\nu_1 - \nu_2}{K - 1}$

**Answer: D**



**Watch Video Solution**

10. A potential difference of 30 kV is applied across an X-ray tube. Find the minimum wavelength of X-ray generated .

A.  $7.07 \times 10^{-2} \text{Å}$

B.  $4.133 \times 10^{-10} m$

C.  $7.07 \times 10^{-10} m$

D.  $4.133 \times 10^{-11} m$

**Answer: D**



**Watch Video Solution**

11. The value of Planck's constant is  $6.63 \times 10^{-34} Js$ . The velocity of light is  $3 \times 10^8 m/sec$ . Which value is closest to the wavelength of quantum of light with frequency of  $8 \times 10^{15} sec^{-1}$  ?

A.  $5 \times 10^{-18} m$

B.  $4 \times 10^{-8} m$

C.  $3 \times 10^7 m$

D.  $2 \times 10^{-25} m$

**Answer: B**



[Watch Video Solution](#)

12. The *MRI* (magnetic resonance imaging) body scanners used in hospitals operate with  $400\text{MHz}$  radio frequency. The wavelength corresponding to this radio frequency is.

- A. 0.75 m
- B. 0.75 cm
- C. 1.5 m
- D. 2 cm

**Answer: A**



[Watch Video Solution](#)

13. Photon of which light has maximum energy :

- A. Red

B. Blue

C. Violet

D. Green

**Answer: C**



**Watch Video Solution**

**14.** Which of the following electromagnetic radiation possesses highest amount of energy ?

A. X- rays

B. Gamma rays

C. Radio waves

D. Cosmis rays

**Answer: D**



**Watch Video Solution**

15. Light of wavelength  $\lambda$  falls on metal having work functions  $hc/\lambda_0$  .

Photoelectric effect will take place only if :

A.  $\lambda \geq \lambda_0$

B.  $\lambda \geq 2\lambda_0$

C.  $\lambda \leq \lambda_0$

D.  $\lambda \leq \lambda_0/2$

**Answer: C**



[Watch Video Solution](#)

16. The work function for metals  $A, B$  and  $C$  are respectively  $1.92eV, 2.0eV$  and  $5eV$ . According to Einstein's equation , the metals which will emit photoelectrons for a radiation of wavelength  $4100\text{\AA}$  are

A. X only

B. X and Y only

C. X , Y and Z

D. X and Z

**Answer: B**



[Watch Video Solution](#)

17. The greater the energy of a photon , the :

A. longer the wavelength and the higher the frequency .

B. longer the wavelength and the lower the frequency .

C. shorter the wavelength and the higher the frequency .

D. shorter the wavelength and the lower the frequency .

**Answer: C**



[Watch Video Solution](#)

18. A photosensitive metallic surfaces has work function  $h\nu_0$  . If photon of  $2h\nu_0$  fall on the surface ,the electrons come out with a maximum velocity of  $4 \times 10^6 m/s$  . If energy of photon is increased to  $5h\nu_0$  , the maximum velocity of photoelectrons will be :

A.  $2 \times 10^7 m/s$

B.  $8 \times 10^6 m/s$

C.  $2 \times 10^6 m/s$

D.  $8 \times 10^5 m/s$

**Answer: B**



**Watch Video Solution**

19. In a photoelectric effect experiment , photons of energy 5.0 eV are incident on metal surface . They liberate electrons which are just stopped by an electrode at a potential of 3.5 eV with respect to metal . The work function of the metal surface in eV is :



- A. 5
- B. 3.5
- C. 1.5
- D. 7

**Answer: C**

 [Watch Video Solution](#)

**20.** What is the energy of photons with a wavelength of 434 nm?

- A.  $2.76 \times 10^5$  kJ//mole
- B.  $2.76 \times 10^2$ kJ /mole
- C.  $2.76 \times 10^{-1}$ kJ /mole
- D.  $2.76 \times 10^{-4}$ kJ /mole

**Answer: B**

 [Watch Video Solution](#)

21. The first ionization energy of Na is  $495.9 \text{ kJ mol}^{-1}$ . What is the longest wavelength of light that could remove an electron from a Na-atom?

A.  $2.41 \times 10^{-7} \text{ m}$

B.  $2.41 \times 10^{-4} \text{ m}$

C. 4.14 m

D.  $4.14 \times 10^3 \text{ m}$

**Answer: A**



**Watch Video Solution**

22. An acidic solution of methyl red has an absorbance of 0.451 at 530 nm in a 5.00 nm cell. Calculate the molarity of methyl red in this solution.

[Molar absorbtivity =  $1.06 \times 10^5 \text{ Lmol}^{-1} \text{ cm}^{-1}$  at 530 nm]

A.  $2.31 \times 10^{-6} \text{M}$

B.  $4.26 \times 10^{-6} \text{M}$

C.  $8.51 \times 10^{-6} \text{M}$

D.  $1.05 \times 10^{-5} \text{M}$

**Answer: C**

 [View Text Solution](#)

**23.** Albert Einstein's explanation of the photoelectric effect confirmed which of the following concepts?

A. Electrons can absorb energy and change levels in atoms .

B. Light energy can be converted into mass of electrons .

C. Electrons have both particle and wave properties .

D. Light has both particle and wave properties.

**Answer: D**

 [Watch Video Solution](#)

24. For which of the following transitions would a hydrogen atom absorb a photon with longest wavelength ?

A.  $n = 1$  to  $n = 2$

B.  $n = 3$  to  $n = 2$

C.  $n = 5$  to  $n = 6$

D.  $n = 7$  to  $n = 6$

**Answer: C**

 [Watch Video Solution](#)

25. The energy required to break one mole of hydrogen-hydrogen bonds in  $H_2$  is 436 kJ. What is the longest wavelength of light with sufficient energy to break a single hydrogen-hydrogen bond?

A. 122 nm

B. 132nm

C. 274 nm

D. 656 nm

**Answer: C**

 [Watch Video Solution](#)

**26.** What is the energy of photon from a laser that emits light at 632.8 nm

A.  $3.14 \times 10^{-19} J$

B.  $1.26 \times 10^{-31} J$

C.  $2.52 \times 10^{-33} J$

D.  $4.19 \times 10^{-40} J$

**Answer: A**

 [Watch Video Solution](#)

27. Which properties of electromagnetic radiation are inversely related?

- A. Amplitude and frequency
- B. Energy and wavelength
- C. Energy and frequency
- D. Wavelength and amplitude

**Answer: B**



[Watch Video Solution](#)

28. Which electronic transition in a hydrogen atom releases the greatest amount of energy?

- A.  $n = 3 \rightarrow n = 2$
- B.  $n = 5 \rightarrow n = 3$
- C.  $n = 6 \rightarrow n = 5$

$$D. n = 3 \rightarrow n = 6$$

**Answer: A**



**Watch Video Solution**

**29.** What is the frequency of light with a wavelength of 480 nm

A.  $1.60 \times 10^{-6} s^{-1}$

B.  $6.25 \times 10^5 s^{-1}$

C.  $6.25 \times 10^{14} s^{-1}$

D.  $1.44 \times 10^{20} s^{-1}$

**Answer: C**



**Watch Video Solution**

30. A 124 W bulb converts only 15 % of the energy supplied to it into visible light of wavelength 640 nm . How many photons are emitted by the light bulb in one second ?

A.  $4 \times 10^{19}$

B.  $6 \times 10^{19}$

C.  $8 \times 10^{18}$

D.  $3 \times 10^{19}$

**Answer: B**



[Watch Video Solution](#)

31. The first ionization energy of caesium is  $6.24 \times 10^{-19} J/\text{atom}$  . What is the minimum frequency of light that is required to ionize a caesium atom ?

A.  $1.06 \times 10^{-15} s^{-1}$



B.  $4.13 \times 10^{14} \text{ s}^{-1}$

C.  $9.42 \times 10^{14} \text{ s}^{-1}$

D.  $1.60 \times 10^{18} \text{ s}^{-1}$

**Answer: C**



**Watch Video Solution**

**32.** Two bulbs A and B are emitting monochromatic light of wavelength such that A can just ionise H atom and B can just ionise  $He^+$  ions. If the power of A and B are 30 W and 40 W respectively, the ratio of number of photons emitted per second by bulb A to bulb B is :

A. 3

B. 4

C.  $\frac{1}{4}$

D.  $\frac{1}{3}$

**Answer: A**



**Watch Video Solution**

**33.** An iodine molecule dissociates into atom after absorbing light of wavelength  $4500\text{\AA}$ . If quantum of radiation is absorbed by each molecule calculate the kinetic energy of iodine (Bond energy of  $I_2$  is  $240\text{kJmol}^{-1}$ )

A.  $8.6 \times 10^{-36} J$

B.  $2.17 \times 10^{-20} J$

C. 433 kJ

D. 4.3 J

**Answer: B**



**Watch Video Solution**

34. A photon of energy  $h\nu$  is absorbed by a free electron of a metal having work-function  $\phi < h\nu$ . Choose the correct option(s).

- A. Number of electrons coming out depends on magnitude of  $\nu$ .
- B. The electron is sure to come out with a kinetic energy  $h\nu - \phi$
- C. Either the electron does not come out or it comes out with a kinetic energy  $h\nu - \phi$
- D. It may come out with a kinetic energy less than and equal to  $h\nu - \phi$

**Answer: D**



[Watch Video Solution](#)

35. Minimum accelerating potential (volts) needed to accelerate an electron to produce a yellow line ( $\lambda = 310 \text{ nm}$ ) in the spectrum, in an electron tube containing some vapours is :

A. 1.2

B. 4

C.  $6.4 \times 10^{-19}$

D.  $2 \times 10^{-15}$

**Answer: B**



**View Text Solution**

36. If  $\lambda_0$  is the threshold wavelength for photoelectric emission.  $\lambda$  wavelength of light falling on the surface on the surface of metal, and  $m$  mass of electron. Then de Broglie wavelength of emitted electron is :-

A.  $\sqrt{\frac{2h(\lambda_0 - \lambda)}{m_e}}$

B.  $\sqrt{\frac{2hc(\lambda_0 - \lambda)}{m_e}}$

C.  $\sqrt{\frac{2hc}{m_e} \left( \frac{\lambda_0 - \lambda}{\lambda \lambda_0} \right)}$

D.  $\sqrt{\frac{2h}{m_e} \left( \frac{1}{\lambda_0} - \frac{1}{\lambda} \right)}$

**Answer: C**



[Watch Video Solution](#)

37. Wavelength of Radiowaves is :

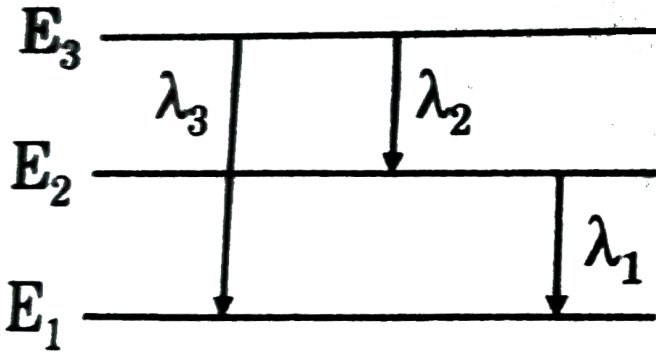
- A.  $<$  Microwaves
- B.  $>$  Microwaves
- C.  $\leq$  Infrared waves
- D.  $\geq$  UV rays

**Answer: B**



[Watch Video Solution](#)

38. In the following transition which statement is correct ?



A.  $E_{3-1} = E_{3-2} - E_{2-1}$

B.  $\lambda_3 = \lambda_1 + \lambda_2$

C.  $v_3 = v_2 + v_1$

D. All of these

Answer: C



Watch Video Solution

1. The potential energy of the electron present in the ground state of  $Li^{2+}$  ion is represented by :

A.  $+\frac{3e^2}{4\pi \epsilon_0 r}$

B.  $-\frac{3e}{4\pi \epsilon_0 r}$

C.  $-\frac{3e^2}{4\pi \epsilon_0 r^2}$

D.  $-\frac{3e^2}{4\pi \epsilon_0 r}$

**Answer: D**



**Watch Video Solution**

2. If radius of ground state of H- atom (according to Bohr' model) is 'R' then radius of 3<sup>rd</sup> energy state of  $Li^{+2}$  is :

A. R

B. 3R

C.  $\frac{R}{3}$

D. 9R

**Answer: B**

 [Watch Video Solution](#)

3. In a certain electronic transition in the hydrogen atoms from an initial state (1) to a final state (2), the difference in the orbit radius ( $(r_1 - r_2)$ ) is 24 times the first Bohr radius. Identify the transition-

A.  $4 \rightarrow 1$

B.  $4 \rightarrow 2$

C.  $4 \rightarrow 3$

D.  $3 \rightarrow 1$

**Answer: C**

 [Watch Video Solution](#)



4. the energy levels for  $A^{+z=-1}$  can be given by :

A.  $E_n$  for  $A^{+(z-1)} = Z^2 \times E_n$  for  $H$

B.  $E_n$  for  $A^{+(z-1)} = Z \times E_n$  for  $H$

C.  $E_n$  for  $A^{+(z-1)} = \frac{1}{Z^2} \times E_n$  for  $H$

D.  $E_n$  for  $A^{+(z-1)} = \frac{1}{Z} \times E_n$  for  $H$

**Answer: A**



**Watch Video Solution**

5. The radii of two of the first four Bohr's orbits of the hydrogen atom are in the ratio 1 : 4. The energy difference between them may be :

A. either 12.09 eV or 3.4 eV

B. either 2.55 eV or 10.2 eV

C. either 13.6 eV or 3.4 eV

D. either 3.4 eV or 0.85 eV

**Answer: B**

 [Watch Video Solution](#)

6. The velocity of electrons in the ground state of H- atom is  $2.185 \times 10^8$  cm/sec . The velocity of electron in the first excited state of  $Li^{2+}$  ion in cm/sec would be :

A.  $3.276 \times 10^8$

B.  $2.185 \times 10^8$

C.  $4.91 \times 10^8$

D.  $1.638 \times 10^8$

**Answer: A**

 [Watch Video Solution](#)

7. The ratio of the radius of two Bohr's orbit of  $Li^{+2}$  is 1:9. What would be their nomenclature.

- A. K and L
- B. L and K
- C. N and L
- D. (b) and (c) both

**Answer: D**



[Watch Video Solution](#)

8. The ratio of radius of first orbit in hydrogen to the radius of first orbit in deuterium will be :

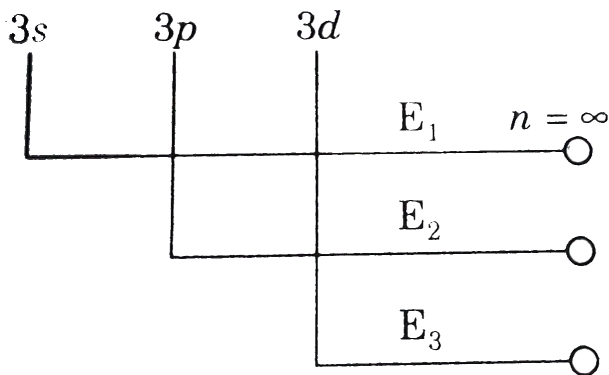
- A. 1:1
- B. 1:2
- C. 2:1

D. 4: 1

Answer: C

 Watch Video Solution

9. For H-atoms , the energy required for the removal of electron from various sub-shells is given as under :



The order of the energies would be :

A.  $E_1 > E_2 > E_3$

B.  $E_3 > E_2 > E_1$

C.  $E_1 = E_2 = E_3$

D. none of these

Answer: C

 Watch Video Solution

10. Which of the following options is incorrect regarding Bohr's Model of an atom ?

A. Ionisation energy (I.E.) order :  $I. E._H < I. E._{He^+} < I. E._{Li^{+2}}$

B. Angular momentum (AM) order of electron in  $n^{th}$  shell :

$$AM_{2ndshell} < AM_{4thshell} < AM_{6thshell}$$

C. If PE at the infinity is assigned as 13.6 eV then ratio of magnitude of

KE to that of PE of 1st Bohr orbit in hydrogen will be in the ratio 1 : 2

.

D. Order of speed ( $v$ ) of electron in  $n$ th shell of hydrogen :

$$V_{2ndshell} > V_{5thshell} > V_{6thshell}$$

**Answer: C**



[Watch Video Solution](#)

**11.** Which of the following transition will have a wavelength different than that observed in rest of the transitions ?

- A. H-atoms , transition from 3rd level to 1st level .
- B.  $He^{1+}$  ion , transition from 5th excited state to 1st excited state .
- C.  $Li^{2+}$  ion , transition from 9th level to 3rd level.
- D.  $Be^{+3}$  ion, transition from 11th excited state to 3rd level .

**Answer: D**



[Watch Video Solution](#)

**12.** A substance absorbs electromagnetic radiations of wavelength 12.3 nm and then emits another electromagnetic radiations of wavelength

24.6 nm . If ratio of number of photons absorbed to number of photons emitted is 2: 1 then ratio of energy absorbed to energy emitted will be :

A. 2: 1

B. 1: 1

C. 4: 1

D. 1: 4

**Answer: C**



[Watch Video Solution](#)

**13.** A unielectronic species is in some excited state 'A' and on absorbing a photon of energy 'x' eV gets promoted to a new state 'B' . On de-excitation back to the ground state a total of 10 different wavelengths were emitted in which seven have energy greater than 'x' eV . What will be the ionisation energy ?

A. 25 x eV

B.  $\frac{225}{16}$  xeV

C.  $\frac{25}{16}$  xeV

D.  $25 \times 9$  x eV

**Answer: B**



**Watch Video Solution**

**14.** The radii of two Bohr's orbits of hydrogen atom are in the ratio of 4 : 9 . Which of the following value of energy difference is not possible between the two orbits? [I.E . = 13.6 eV]

A. 1.9 eV

B. 0.472 eV

C. 0.66 eV

D. 0.21 eV

**Answer: C**



[Watch Video Solution](#)

15. In a hypothetical model of an atoms following Bohr's theory, the potential energy is given by potential energy =  $-\frac{Ke^2}{4r^4}$ . Which of the following options will be correct ? (Symbols have usual meaning)

A.  $KE = -PE$

B.  $r = \frac{nhc}{4\pi} \sqrt{\frac{K}{m}}$

C.  $v = \frac{n^2h^2}{4\pi^2m^{3/2}e\sqrt{K}}$

D.  $TE = \frac{-Ke^2}{2r^4}$

Answer: C

[Watch Video Solution](#)

16. The time period of revolution in the 3rd orbit of  $Li^{2+}$  ions is x sec .

The time period of revolution in the 2 nd orbit of  $He^+$  ion , should be :

A.  $x$  sec

B.  $\frac{3}{2} x$  sec

C.  $\frac{2}{3} x$  sec

D.  $\frac{8}{27} x$  sec

**Answer: C**



**Watch Video Solution**

17. The charge on the electron and proton is reduced to half. Let the present value of the Rydberg constant is  $R$ . What will be the new value of the Rydberg constant ?

A.  $\frac{R}{2}$

B.  $\frac{R}{4}$

C.  $\frac{R}{8}$

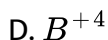
D.  $\frac{R}{16}$

**Answer: D**

 [Watch Video Solution](#)

**18.** A hydrogen like species with atomic number  $Z$  is present in a higher excited state ( $n$ ) . This electron can make transition to the first excited level by successively emitting two photons of energy 2.64 eV and 48.36 eV . This electron can also make transition to third excited state by emitting three photons of energy 2.64 eV , 2. 66 eV and 4.9 eV .

Identify the hydrogen like species involved .



**Answer: C**

 [Watch Video Solution](#)

19. The ratio of  $(E_2 - E_1)$  to  $(E_4 - E_3)$  for  $He^+$  ion is approximately equal to (where  $E_n$  is the energy of nth orbit):

- A. 10
- B. 15
- C. 17
- D. 12

**Answer: B**



[Watch Video Solution](#)

20.  $1^{st}$  excitation Potential of a hydrogen like sample is 15 volt. If all the atoms of the sample are in  $2^{nd}$  excited state then find the  $K. E.$  in  $eV$  of the electron ejected if a photon of energy  $\frac{65}{9}eV$  is supplied to this sample.

- A. 54.4 eV

B. 24 eV

C. 122.4 eV

D. 216 eV

**Answer: D**



[Watch Video Solution](#)

21. If the ionization energy of  $He^+$  is  $19.6 \times 10^{-18} J$  per atom then the energy of  $Be^{3+}$  ion in the second stationary state is :

A.  $3^2 \times 21.7 \times 10^{-19} J$

B.  $21.79 \times 10^{-19} J$

C.  $\frac{1}{3} \times 21.79 \times 10^{-19} J$

D.  $\frac{1}{3^2} \times 21.79 \times 10^{-19} J$

**Answer: B**



[Watch Video Solution](#)

22. The binding energy of  $e^-$  in ground state of hydrogen atom is 13.6 eV . The energies required to eject out an electron from three lowest states of  $He^+$  atom will be (in eV):

- A. 13.6 , 10.2 , 3.4
- B. 13.6, 3.4 , 1.5
- C. 13.6 , 27.2 , 40.8
- D. 54.4 , 13.6 , 6

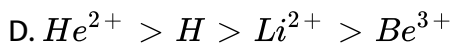
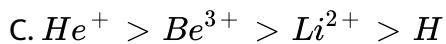
Answer: D



Watch Video Solution

23. Correct order of radius of the first orbit of  $H, He^+, Li^{2+}, Be^{3+}$  is :

- A.  $H > He^+ > Li^{2+} > Be^{3+}$
- B.  $Be^{3+} > Li^{2+} > He^+ > H$



**Answer: A**



**Watch Video Solution**

**24.** What is likely to be principal quantum number for a circular orbit of diameter  $20nm$  of the hydrogen atom if we assume Bohr orbit be the same as that represented by the principal quantum number?

(a). 10

(b). 14

(c). 12

(d). 16

A. 10

B. 14

C. 12

Answer: B

 Watch Video Solution

25. Which of the correct relationship?

A.  $E_1 \text{ of } H = \frac{1}{2} E_2 \text{ of } He^+ = \frac{1}{3} E_3 \text{ of } Li^{2+} = \frac{1}{4} E_4 \text{ of } Be^{3+}$

B.  $E_1(H) = E_2(He^+) = E_3(Li^{2+}) = E_4(Be^{3+})$

C.  $E_1(H) = 2E_2(He^+) = 3E_3(Li^{2+}) = 4E_4(Be^{3+})$

D. None of these

Answer: B

 Watch Video Solution



26. If the value of  $E = -78.4\text{kcal/mol}$ , the order of the orbit in hydrogen atom is-

- A. 4
- B. 3
- C. 2
- D. 1

**Answer: C**



[Watch Video Solution](#)

27. If velocity of an electron in 1st orbit of H atoms is  $V$ , what will be the velocity in 3rd orbit of  $Li^{2+}$  ?

- A.  $v$
- B.  $\frac{v}{3}$
- C.  $3v$

D. 9v

**Answer: A**



[Watch Video Solution](#)

**28.** In a certain electronic transition in the hydrogen atoms from an initial state (1) to a final state (2), the difference in the orbit radius ( $(r_1 - r_2)$ ) is 24 times the first Bohr radius. Identify the transition-

A.  $5 \rightarrow 1$

B.  $25 \rightarrow 1$

C.  $8 \rightarrow 3$

D.  $6 \rightarrow 5$

**Answer: A**



[Watch Video Solution](#)

29. The species which has its fifth ionization potential equal to 340 V is :

A.  $B^+$

B.  $C^+$

C.  $B$

D.  $C$

**Answer: C**



[Watch Video Solution](#)

30. In hydrogen atom an orbit has a diameter of about  $16.92\text{\AA}$ . What is the maximum number of electrons that can be accommodated ?

A. 8

B. 32

C. 50

D. 72

**Answer: B**



**Watch Video Solution**

**31.** Ratio of frequency of revolution of electron in the second state of  $He^{\oplus}$  revolution of electron in the second state  $He^{\ominus}$  and second state of hydrogen is

A.  $\frac{32}{27}$

B.  $\frac{27}{32}$

C.  $\frac{1}{54}$

D.  $\frac{27}{2}$

**Answer: A**



**Watch Video Solution**

**32.** The number of waves in the fourth bohr orbit of hydrogen is

A. 3

B. 4

C. 9

D. 12

**Answer: B**



**Watch Video Solution**

**33.** An excited hydrogen atom returns to the ground state . The wavelength of emitted photon is  $\lambda$  The principal quantum number of the excited state will be :

A.  $\left[ \frac{\lambda R + 1}{\lambda R} \right]^{1/2}$

B.  $[\lambda R(\lambda R + 1)]^{1/2}$

C.  $\left[ \frac{\lambda R}{\lambda R - 1} \right]^{1/2}$

D.  $\left[ \frac{1}{\lambda R(\lambda R + 1)} \right]^{1/2}$

**Answer: C**



[Watch Video Solution](#)

**34.** What is the separation energy (in eV ) for  $Be^{3+}$  in the first excited state ?

A. 13 .6 eV

B. 27.2 eV

C. 40.8 eV

D. 54. 4 eV

**Answer: D**



[Watch Video Solution](#)

**35.** When an electron makes a transition from  $(n + 1)$  state to  $n$  state the frequency of emitted radiation is related to  $n$  according to  $(n > > 1)$

A.  $v \propto n^{-3}$

B.  $v \propto n^2$

C.  $v \propto n^3$

D.  $v \propto n^{2/3}$

**Answer: A**

 [Watch Video Solution](#)

**36.** Which of the following statements is wrong for H-like atom ?

A. Magnitude of energy of an orbit in H-like species is directly proportional to  $1/n^2$

B. Frequency of revolution of an electron in an orbit is proportional to  $n^3$

C. Radius of a Bohr orbit is proportional to  $n^2$

D. Time period of revolution of an electron is proportional to  $n^3$

**Answer: B**

 [Watch Video Solution](#)

37. The angular momentum of electron in an excited H atom is  $\frac{h}{\pi}$ . The P.E. of electron will be :

- A. 6.8 eV
- B. 3.4 eV
- C.  $-6.8\text{eV}$
- D.  $3.4\text{eV}$

**Answer: C**

 [Watch Video Solution](#)

38. Potential energy of electron present in 2nd orbit of  $\text{Li}^{2+}$  is  $:(r_0 =$   
Radius of 1st Bohr's orbit )



A.  $\frac{e^2}{4\pi \epsilon_0 r_0}$

B.  $-\frac{3e^2}{4\pi \epsilon_0 r_0}$

C.  $-\frac{3e^2}{16\pi \epsilon_0 r_0}$

D.  $-\frac{9e^2}{16\pi \epsilon_0 r_0}$

**Answer: C**



**Watch Video Solution**

**39.** The maximum energy is present in any electron at

A. nucleus

B. ground state

C. first excited state

D. infinite distance from the nucleus

**Answer: D**



**Watch Video Solution**

40. When electron in a Bohr atom is excited then which of the following increases?

- A. Potential energy
- B. Time period of revolution
- C. Angular momentum
- D. All of the above

Answer: D



Watch Video Solution

41. Given  $\Delta H$  for the process  $Li(g) \rightarrow Li^{+3}(g) + 3e^{-}$  is  $19800 kJ/mole$  &  $IE_1$  for  $Li$  is 520 then  $IE_2$  &  $IE_1$  of  $Li^{+}$  are respectively (approx value) :-

- (a). 11775, 7505
- (b). 19280, 520

(c). 11775, 19280

(d). data insufficient

A. 7505, 11775

B. 520 , 19280

C. 11775 , 19280

D. data sufficient

**Answer: A**



**Watch Video Solution**

**42.** For a valid Bohr orbit , its circumference should be :

A.  $= n\lambda$

B.  $= (n - 1)\lambda$

C.  $> n\lambda$

D.  $< n\lambda$

**Answer: A**



**Watch Video Solution**

**43.** Let the I.E. of hydrogen like species be 320 eV . Find out the value of quantum number having the energy equal to  $-20$  eV .

A.  $n = 2$

B.  $n = 3$

C.  $n = 4$

D.  $n = 5$

**Answer: C**



**View Text Solution**

**44.** Angular momentum for P-shell electron is :

A.  $\frac{3h}{\pi}$

B. zero

C.  $\frac{\sqrt{2}h}{2\pi}$

D. none of these

**Answer: c**



**Watch Video Solution**

**45.** The energy of an electron in the first Bohr orbit is  $-13eV$ . The energy of  $Be^{3+}$  in the first excited state is :

A.  $-30.6eV$

B.  $-40.8eV$

C.  $-54.4 eV$

D.  $+40.8 eV$

**Answer: C**

 [Watch Video Solution](#)

46. How do the energy gaps between successive electron energy levels in an atom vary from low to high  $n$  values ?

- A. All energy gaps are the same .
- B. The energy gap decreases as  $n$  increases.
- C. The energy gap increases as  $n$  increases.
- D. The energy gap changes unpredictably as  $n$  increases .

**Answer: B**

 [Watch Video Solution](#)

47. In a hydrogen atom , which transition produces a photon with the highest energy ?

- A.  $n = 3 \rightarrow n = 1$

B.  $n = 5 \rightarrow n = 3$

C.  $n = 12 \rightarrow n = 10$

D.  $n = 22 \rightarrow n = 20$

**Answer: A**



**Watch Video Solution**

48.  $S_1$  : Bohr model is applicable for  $Be^{2+}$  ion .

$S_2$  : Total energy coming out of any light source is integral multiple of energy of one photon.

$S_3$  : Number of waves present in unit length if wave number .

$S_4$  :  $e/m$  ratio in cathode ray experiment is independent of the nature of the gas .

Select the correct set of True-False for above statement.

A. FFTT

B. TTFF

C. FTTT

D. TFFF

**Answer: C**



**Watch Video Solution**

49.  $S_1$  : Potential energy of the two opposite charge system increase with the decrease in distance .

$S_2$  : When an electron makes transition from higher orbit to lower orbit it's kinetic energy increases.

$S_3$  : When an electron make transition from lower energy to higher energy state its potential energy increases.

$S_4$  : 11 eV photon can free an electron from 1 st excited state of  $He^+$  ion .

Select the correct set of true-false for above statements.

A. TTTT

B. FTTF

C. TFFT



D. FFFF

**Answer: B**



[Watch Video Solution](#)

50. The energy of hydrogen atom in its ground state is  $-13.6\text{eV}$ . The energy of the level corresponding to the quantum number  $n = 5$  is

A.  $-0.54\text{ eV}$

B.  $-5.40\text{eV}$

C.  $-0.85\text{eV}$

D.  $-2.72\text{eV}$

**Answer: A**



[Watch Video Solution](#)

51. The wave number of electromagnetic radiations emitted during the transition of electron in between two levels of  $Li^{2+}$  ion having sum of the principal quantum numbers 4 and difference is 2 ,will be:

( $R_H$  = Rydberg constant )

A.  $3.5R_H$

B.  $4R_H$

C.  $8R_H$

D.  $\frac{8}{9}R_H$

**Answer: C**



**Watch Video Solution**

52. In Bohr's model of the hydrogen atom the ratio between the period of revolution of an electron in the orbit of  $n = 1$  to the period of the revolution of the electron in the orbit  $n = 2$  is :-

(a). 1 : 2

(b). 2:1

(c). 1:4

(d). 1:8

A. 1:2

B. 2:1

C. 1:4

D. 1:8

**Answer: D**



[Watch Video Solution](#)

**53.** In an atom, two electrons move around nucleus in circular orbits of radii ( $R$ ) and ( $4R$ ). The ratio of the time taken by them to complete one revolution is :

A. 1:4

B. 4:1

C. 1:8

D. 8:1

**Answer: C**



[Watch Video Solution](#)

54. If first ionisation potential of a hypothetical atom is  $16V$ , then the first excitation potential will be :

A. 10.2 V

B. 12V

C. 14 V

D. 16V

**Answer: B**



[Watch Video Solution](#)

55. The angular momentum of electron in a given orbit is  $J$ . Its kinetic energy will be :

A.  $\frac{1}{2} \frac{J^2}{mr^2}$

B.  $\frac{Jv}{r}$

C.  $\frac{J^2}{2m}$

D.  $\frac{J^2}{2\pi}$

**Answer: A**



**Watch Video Solution**

56. According to Bohr's model of hydrogen atom the electric current generated due to motion of electron in  $n$ th orbit is :

A.  $\frac{4\pi^2 mk^2 e^4}{n^2 h^2}$

B.  $\frac{4\pi^2 mk^2 e^5}{n^2 h^2}$

C.  $\frac{n^2 h^2}{4\pi^2 mk^2 e^5}$

D.  $\frac{4\pi^2 m k^2 e^5}{n^3 h^3}$

**Answer: D**



[Watch Video Solution](#)

57. In a sample of H-atoms , electrons de-excite from a level 'n' to 1 . The total number of lines belonging to Balmer series are two . If the electrons are ionised from level 'n' by photons of energy 13 eV . Then the kinetic energy of the ejected photoelectrons will be :

- A. 12.15 eV
- B. 11.49 eV
- C. 12.46 eV
- D. 12.63 eV

**Answer: A**



[Watch Video Solution](#)

58. The orbit having Bohr radius equal to 1st Bohr orbit of H-atom is :

A.  $n = 2$  of  $He^+$

B.  $n = 2$  of  $B^{+4}$

C.  $n = 3$  of  $Li^{2+}$

D.  $n = 2$  of  $Be^{+3}$

Answer: D



Watch Video Solution

59. Energy of H-atom in the ground state is  $-13.6\text{eV}$ . Hence energy in the second excited state is

A.  $-6.8\text{eV}$

B.  $-3.4\text{eV}$

C.  $-1.51\text{eV}$

D.  $-4.53\text{eV}$

**Answer: C**

 [Watch Video Solution](#)

**60.** The wavelength of the radiation emitted , when in a hydrogen atom electron falls from infinity to stationary state 1 , would be :

(Rydberg constant =  $1.097 \times 10^7 m^{-1}$ )

A. 91 nm

B. 192 nm

C. 406 nm

D.  $9.1 \times 10^{-6}$  nm

**Answer: A**

 [Watch Video Solution](#)



61. According to Bohr's theory the angular momentum of an electron in 5th orbit is :

A.  $25(h/\pi)$

B.  $1.0(h/\pi)$

C.  $10(h/\pi)$

D.  $2.5(h/\pi)$

**Answer: D**



[Watch Video Solution](#)

62. The ionization enthalpy of hydrogen atom is  $1.312 \times 10^6 \text{ Jmol}^{-1}$ . The energy required to excite the electron in the atom from  $n = 1$  to  $n = 2$  is :

A.  $8.51 \times 10^5 \text{ Jmol}^{-1}$

B.  $6.56 \times 10^5 \text{ Jmol}^{-1}$

C.  $7.56 \times 10^5 \text{ Jmol}^{-1}$

D.  $9.84 \times 10^5 \text{ Jmol}^{-1}$

**Answer: D**

 [Watch Video Solution](#)

**63.** When  $Z$  is doubled in an atom, which of the following statements are consistent with Bohr's theory ?

A. Energy of a state is doubled

B. Radius of an orbit is doubled

C. Velocity of electron in an orbit is doubled

D. Energy of a state is halved

**Answer: C**

 [Watch Video Solution](#)

64. Ionization energy of a hydrogen-like ion A is greater than that of another hydrogen like ion B . Let  $r$ ,  $u$ ,  $E$  and  $L$  represent the radius of the orbit , speed of the electron , total energy of the electron and angular momentum of the electron respectively (for the same  $n$  ). In ground state :

A.  $r_A > r_B$

B.  $u_A > u_B$

C.  $E_A > E_B$

D.  $L_A > L_B$

**Answer: B**



[Watch Video Solution](#)

65. The potential energy of the electron present in the ground state of  $Li^{2+}$  ion is represented by :

A.  $+\frac{e^2}{\pi \epsilon_0 r}$

B.  $-\frac{e}{\pi \epsilon_0 r}$

C.  $-\frac{e^2}{\pi \epsilon_0 r^2}$

D.  $-\frac{e^2}{\pi \epsilon_0 r}$

**Answer: D**



**Watch Video Solution**

**66.** Photons of equal energy were incident on two different gas samples. One sample containing H-atoms in the ground state and the other sample containing H-atoms in some excited state with a principle quantum number 'n'. The photonic beams totally ionise the H-atoms. If the difference in the kinetic energy of the ejected electrons in the two different cases is  $12.75eV$ . Then find the principal quantum number 'n' of the excited state.

A. 1

B. 2

C. 3

D. 4

**Answer: D**



[Watch Video Solution](#)

67. The potential energy of the electron present in the ground state of  $Li^{2+}$  ion is represented by :

A.  $\frac{3e^2}{8\pi \epsilon_0 r}$

B.  $-\frac{3e^2}{8\pi \epsilon_0 r}$

C.  $\frac{3e^2}{4\pi \epsilon_0 r}$

D.  $-\frac{3e^2}{4\pi \epsilon_0 r}$

**Answer: A**



[Watch Video Solution](#)

68. Which transition in  $Li^{2+}$  would have the same wavelength as the  $2 \rightarrow 4$  transition in  $He^+$  ion ?

A.  $4 \rightarrow 2$

B.  $2 \rightarrow 4$

C.  $3 \rightarrow 6$

D.  $6 \rightarrow 2$

**Answer: C**



**Watch Video Solution**

69. Suppose a gaseous mixtures of  $He$ ,  $Ne$ ,  $Ar$  and  $Kr$  is irradiated with photons for frequency appropriate to ionize  $Ar$ , What ions will be present in the mixture ?

A.  $He^+$  only

B.  $Ne^+$  only

C.  $He^+$ ,  $Ne^+$ ,  $Ar^+$  only

D.  $Ne^+$ ,  $Kr^+$ ,  $Ar^+$  only

**Answer: D**

 [Watch Video Solution](#)

70. The kinetic energy of an electron in the second Bohr orbit of a hydrogen atom is [ $a_0$  is Bohr radius] :

A.  $\frac{h^2}{4\pi^2ma_0^2}$

B.  $\frac{h^2}{16\pi^2ma_0^2}$

C.  $\frac{h^2}{32\pi^2ma_0^2}$

D.  $\frac{h^2}{64\pi^2ma_0^2}$

**Answer: C**

 [Watch Video Solution](#)

71. Three photons originating from excited atomic hydrogen atoms are found to have energies of 0.66 eV , 1.89 eV and 2.55 eV respectively . The minimum no. of atoms that must be present are :

- A. one atom
- B. two atoms
- C. three atoms
- D. can't say

**Answer: B**



[Watch Video Solution](#)

72. The velocity of electrons in the 3rd excited state of a hydrogen atom is [ $a_0$  is Bohr radius ]:

- A.  $\frac{h^2}{3\pi^2 m a_0}$
- B.  $\frac{h^2}{3\pi^2 m a_0^2}$



C.  $\frac{8h}{\pi m a_0}$

D.  $\frac{h}{8\pi m a_0}$

**Answer: D**



**Watch Video Solution**

**73.** Which of the following is the energy of a possible excited state of hydrogen?

A.  $-3.4\text{eV}$

B.  $+6.8\text{ eV}$

C.  $+13.6\text{ eV}$

D.  $-6.8\text{ eV}$

**Answer: A**



**Watch Video Solution**

74. Wavelength of radiation emitted when an electron jumps from a state A and C is  $3000\text{\AA}$  and it is  $6000\text{\AA}$  when the electron jumps from state B to C . Wavelength of the radiation emitted when an electron jumps from state A to B will be :

A.  $2000\text{\AA}$

B.  $3000\text{\AA}$

C.  $4000\text{\AA}$

D.  $6000\text{\AA}$

**Answer: D**

 [Watch Video Solution](#)

75. Difference in wavelength of two extreme lines of Lyman series in emission spectrum of  $He^+$  would be :

A.  $\frac{1}{12R_H}$

B.  $\frac{12}{R_H}$

C.  $\frac{1}{4R_H}$

D.  $\frac{1}{3R_H}$

**Answer: A**



**Watch Video Solution**

**76.** A collection of H-atoms in 9th excited state returns to ground state . Calculate ratio of total number of spectral lines emitted without emitting any line in Brackett series to number of Brackett series lines .

A.  $\frac{36}{6}$

B.  $\frac{45}{6}$

C.  $\frac{45}{39}$

D. 6

**Answer: A**

77. Last line of Lyman series for  $H$  – atom has wavelength  $\lambda_1 A$ ,  $2^{nd}$  line of Balmer series has wavelength  $\lambda_2 A$  then

A.  $\frac{16}{\lambda_1} = \frac{9}{\lambda_2}$

B.  $\frac{16}{\lambda_2} = \frac{3}{\lambda_1}$

C.  $\frac{4}{\lambda_1} = \frac{1}{\lambda_2}$

D.  $\frac{16}{\lambda_1} = \frac{3}{\lambda_2}$

**Answer: B**

78. For the Hydrogen spectrum , last line of the Lyman series has frequency  $\nu_1$  , last line of Lyman series of  $He^+$  ion has frequency  $\nu_2$  and last line of Balmer series of

A.  $2(v_1 + v_3) = v_2$

B.  $v_1 = v_3$

C.  $4v_1 = v_2$

D. All of these

**Answer: D**



**Watch Video Solution**

**79.** The number of possible line of Paschen series when electron jumps from seventh excited state up to ground state (in hydrogen like atom) is :

A. 2

B. 5

C. 4

D. 3

**Answer: B**

 [Watch Video Solution](#)

80. The wave number of the first line of Balmer series of hydrogen is  $15200\text{cm}^{-1}$ . The wave number of the first Balmer line of  $\text{Li}^{2+}$  ion is

A.  $2.4 \times 10^5\text{cm}^{-1}$

B.  $24.3 \times 10^5\text{cm}^{-1}$

C.  $6.08 \times 10^5\text{cm}^{-1}$

D.  $60.8 \times 10^5\text{cm}^{-1}$

**Answer: A**

 [Watch Video Solution](#)

81. The shortest wavelength in Lyman series of  $\text{Li}^{2+}$  ion is :

A.  $10.13\text{\AA}$

B.  $135\text{\AA}$

C.  $13.5\text{\AA}$

D.  $101.3\text{\AA}$

**Answer: D**

 [Watch Video Solution](#)

82. What hydrogen-like ion has the wavelength difference between the first lines of Balmer and Lyman series equal to  $59.3\text{nm}$ ?

$$R_H = 109678\text{cm}^{-1}$$

A. 2

B. 3

C. 4

D. 1

**Answer: B**

 [Watch Video Solution](#)

83. The longest wavelength of the Lyman series for Hydrogen atom is the same as the wavelength of a certain line in the spectrum of  $He^+$  when the electron makes a transition from  $n \rightarrow 2$ . The value of  $n$  is :

A. 3

B. 4

C. 5

D. 6

**Answer: B**



[Watch Video Solution](#)

84. Ratio of wavelength of series limit of Paschen and Brackett series for a single electronic species is :

A.  $\frac{4}{9}$



B.  $\frac{12}{7}$

C.  $\frac{9}{16}$

D.  $\frac{16}{25}$

**Answer: C**



**Watch Video Solution**

**85.** When electron are de-exciting from  $n$ th orbit of hydrogen atoms to ground state, 15 spectral lines are formed . The shortest wavelength among these will be :

A.  $\frac{11}{900}R$

B.  $\frac{36}{35R}$

C.  $\frac{35}{36}R$

D.  $\frac{35}{36R}$

**Answer: B**



Watch Video Solution

86. Total no of lines in Lyman series of H spectrum will be-

(where  $n$ =no. of orbits)

A.  $n$

B.  $n - 1$

C.  $n - 2$

D.  $n(n + 1)$

Answer: B



Watch Video Solution

87. The wavelength for a spectral line for an electronic transition is inversely related to :

A. number of electrons undergoing transition

- B. the nuclear charge of the atom
- C. the velocity of an electron undergoing transition
- D. the difference in the energy levels involved in the transition

**Answer: D**

 [Watch Video Solution](#)

**88.** Number of visible lines when an electron returns from 5th orbit to ground state in H spectrum :

- A. 5
- B. 4
- C. 3
- D. 10

**Answer: C**

 [Watch Video Solution](#)

89. In a sample of  $H - \alpha$  atom electrons make transition from  $5^{th}$  excited state to ground state, producing all possible types of photons, then number of lines in infrared region are

A. 4

B. 5

C. 6

D. 3

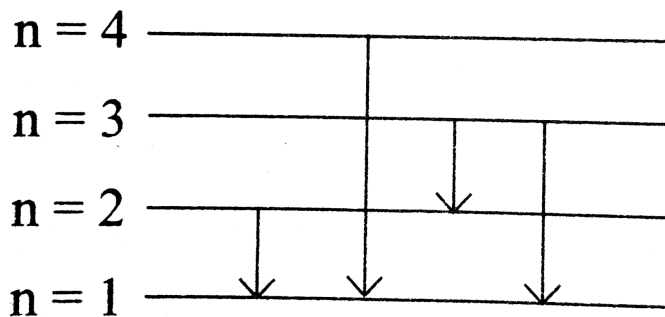
**Answer: C**



[Watch Video Solution](#)

90. Suppose that a hypothetical atom gives a red, green, blue and violet line spectrum. Which jump according to figure would give off the red

spectral line.



A.  $3 \rightarrow 1$

B.  $2 \rightarrow 1$

C.  $4 \rightarrow 1$

D.  $3 \rightarrow 2$

**Answer: D**



**Watch Video Solution**

91. The difference between the wave number of 1st line of Balmer series and last line of Paschen series for  $Li^{2+}$  ion is :

A.  $\frac{R}{36}$

B.  $\frac{5R}{36}$

C.  $4R$

D.  $\frac{R}{4}$


**Answer: D**



**Watch Video Solution**

**92.** What would be the maximum number of emission lines for atomic hydrogen that you would expect to see with the naked eye if the only

electronic energy involved are those as shown in figure ?



- A. 4
- B. 6
- C. 5
- D. 15

**Answer: A**



[Watch Video Solution](#)

93. Monochromatic radiation of wavelength  $\lambda$  is incident on a hydrogen sample in ground state. Hydrogen atoms absorb a fraction of light and subsequently emit radiations of six different wavelength . Find the wavelength  $\lambda$ .

A. 97.5 nm

B. 121.6 nm

C. 110.3 nm

D. None of these

**Answer: A**

 [Watch Video Solution](#)

94. Which electronic transition in atomic hydrogen corresponds to the emission of visible light ?

A.  $n = 5 \rightarrow n = 2$



B.  $n = 1 \rightarrow n = 2$

C.  $n = 3 \rightarrow n = 4$

D.  $n = 3 \rightarrow n = 1$

**Answer: A**

 [Watch Video Solution](#)

95. The wave number of the first line of Balmer series of hydrogen is  $15200\text{cm}^{-1}$ . The wave number of the first Balmer line of  $\text{Li}^{2+}$  ion is

A.  $456200\text{cm}^{-1}$

B.  $136800\text{cm}^{-1}$

C.  $738720\text{cm}^{-1}$

D.  $152000\text{cm}^{-1}$

**Answer: C**

 [Watch Video Solution](#)

96. Let  $\nu_1$  be the frequency of the series limit of the Lyman series  $\nu_2$  be the frequency of the first line of the Lyman series and  $\nu_3$  be the frequency of the series limit of the Balmer series. Then

A.  $\nu_1 - \nu_2 = \nu_3$

B.  $\nu_2 - \nu_1 = \nu_3$

C.  $\nu_3 = \frac{1}{2}(\nu_2 - \nu_1)$

D.  $\nu_1 + \nu_2 = \nu_3$

**Answer: A**



**Watch Video Solution**

97. Wave number of spectral line for a given transition is  $x \text{ cm}^{-1}$  for  $\text{He}^+$ , then its value for  $\text{Be}^{3+}$  (isoelectronic of  $\text{He}^+$ ) for same transition is:

A.  $x \text{ cm}^{-1}$

B.  $4x\text{ cm}^{-1}$

C.  $\frac{x}{4}\text{ cm}^{-1}$

D.  $2x\text{ cm}^{-1}$

**Answer: B**



**Watch Video Solution**

**98.** An atom has  $x$  energy level, then total number of lines in its spectrum are :

A.  $1 + 2 + 3 + \dots + (x + 1)$

B.  $1 + 2 + 3 + \dots + (x^2)$

C.  $1 + 2 + 3 + \dots + (x - 1)$

D.  $(x + 1)(x + 2)(x + 4)$

**Answer: C**



**Watch Video Solution**

99. The ratio of wavelength of photon corresponding to the  $\alpha$ -line of Lyman series in H-atom and  $\beta$ -line of Balmer series in  $He^+$  is :

- A. 1:1
- B. 1:2
- C. 1:4
- D. 3:16

**Answer: A**



[Watch Video Solution](#)

100. If the shortest wavelength of H-atom in Lyman series is  $x$ , then longest wavelength in Balmer series of  $He^{2+}$  is :

- A.  $\frac{9x}{5}$
- B.  $\frac{36x}{5}$

C.  $\frac{5x}{9}$

D.  $\frac{5x}{36}$

**Answer: B**

 [Watch Video Solution](#)

**101.** Change in angular momentum when an electron makes a transition corresponding to the 3rd line of the Balmer series in  $Li^{2+}$  ion is :

A.  $\frac{h}{2\pi}$

B.  $\frac{2h}{2\pi}$

C.  $\frac{3h}{2\pi}$

D.  $\frac{4h}{2\pi}$

**Answer: C**

 [Watch Video Solution](#)

**102.** In Bohr series of lines of hydrogen spectrum, third line from the red end corresponds to which one of the following inner orbit jumps of electron for Bohr orbit in atom in hydrogen :

A.  $3 \rightarrow 2$

B.  $5 \rightarrow 2$

C.  $4 \rightarrow 1$

D.  $2 \rightarrow 5$

**Answer: B**



[Watch Video Solution](#)

**103.** When an excited hydrogen atom returned to its ground state, some visible quanta were observed along with other quanta. Which of the following transitions must have occurred ?

A.  $2 \rightarrow 1$

B.  $3 \rightarrow 1$

C.  $3 \rightarrow 2$

D.  $4 \rightarrow 2$

**Answer: A**



**Watch Video Solution**

**104.** There are two samples of  $H$  and  $He^+$  atom. Both are in some excited state. In hydrogen atom, total number of lines observed in Balmer series is 4 in  $He^+$  atom total number of lines observed in Paschen series is 1. Electron in hydrogen sample make transitions to lower states from its excited state, then the photon corresponding to the line of maximum energy line Balmer series of  $H$  sample is used to further excite the already excited  $He^+$  sample. The maximum excitation level of  $He^+$  sample will be :

A.  $n = 6$

B.  $n = 8$

C.  $n = 12$

D.  $n = 9$

**Answer: C**



[Watch Video Solution](#)

**105.** In Bohr series of lines of hydrogen spectrum, third line from the red end corresponds to which one of the following inner orbit jumps of electron for Bohr orbit in atom in hydrogen :

A.  $5 \rightarrow 2$

B.  $4 \rightarrow 1$

C.  $2 \rightarrow 5$

D.  $3 \rightarrow 2$

**Answer: D**



[Watch Video Solution](#)



106. Wavelength of radiation emitted when an electron jumps from a state A and C is  $3000\text{\AA}$  and it is  $6000\text{\AA}$  when the electron jumps from state B to C . Wavelength of the radiation emitted when an electron jumps from state A to B will be :

A.  $2000\text{\AA}$

B.  $3000\text{\AA}$

C.  $4000\text{\AA}$

D.  $6000\text{\AA}$

**Answer: B**



[Watch Video Solution](#)

107. Which of the following series of transitions in the spectrum of hydrogen atom falls in visible region?

A. Lyman series

B. Balmer series

C. Paschen series

D. Brackett series

**Answer: B**



**Watch Video Solution**

**108.** Maximum number of different spectral lines which will be obtained in visible region when in a sample of large number of H-atoms containing atoms in 2nd , 3rd and 5th excited state only is given by :

A. 3

B. 4

C. 15

D. depends on relative number of atoms in 2nd , 3rd and 5th excited state.

**Answer: B**

 [Watch Video Solution](#)

**109.** With a certain radiation of a particular frequency  $\nu$ , to which hydrogen atoms are exposed, the maximum number of spectral lines obtained is 15. The upper most energy level to which the  $e^-$  is excited is  $n =$

A. 4

B. 5

C. 6

D. 7

**Answer: C**

 [Watch Video Solution](#)

110. Which of the following statements is correct ?

- A. Indigo light have less energy as compared to yellow
- B. Bright lines are formed on dark background of the photographic film in emission spectrum
- C. X-rays have more frequency as compared to  $\gamma$ -rays
- D. Bright lines are formed on dark background of the photographic film in absorption spectrum

**Answer: B**



[Watch Video Solution](#)

111. Monochromatic radiation of wavelength  $\lambda$  are incident on a hydrogen sample in ground state. Hydrogen atoms absorb the light and subsequently emit radiations of 10 different wavelength . The value of  $\lambda$  is nearly :

A. 203 nm

B. 95 nm

C. 80 nm

D. 73 nm

**Answer: B**



**Watch Video Solution**

**112.** The ratio of wavelength of 1st line of Balmer series and 2nd line of Lyman series is :

A.  $32/5$

B. 2

C. 3

D. 16

**Answer: A**

 [Watch Video Solution](#)

113. Difference in wavelength of two extreme lines of H-atom in Balmer region is (where  $R_H$  is Rydberg constant ):

A.  $\frac{7.2}{R_H}$

B.  $\frac{0.25}{R_H}$

C.  $\frac{4}{R_H}$

D.  $\frac{3.2}{R_H}$

**Answer: D**

 [Watch Video Solution](#)

114. A hydrogen atom in an excited state emits a photon which has the longest wavelength of the Paschen series . Further emissions from the atom cannot include the :

- A. longest wavelength of the Lyman series
- B. second longest wavelength of the Lyman series
- C. longest wavelength of the Balmer series
- D. second longest wavelength of the Balmer series

**Answer: D**

 [Watch Video Solution](#)

**115.** In collection of H-atom all electrons jump from 5th excited state to ground level finally , without emitting any line in infrared region . Total number of possible different radiations are :

- A. 9
- B. 15
- C. 6
- D. 3

**Answer: D**

 [Watch Video Solution](#)

**116.** Which region of the electromagnetic spectrum is capable of inducing electron transitions with the greatest energy ?

- A. Infrared
- B. Microwave
- C. Ultraviolet
- D. Visible

**Answer: C**

 [Watch Video Solution](#)

**117.** The emission spectrum of hydrogen in the visible consists of :



- A. a continuous band of light .
- B. a series of equally spaced lines .
- C. a series of lines that are closer at low energies .
- D. a series of lines that are closer at high energies .

**Answer: D**

 [Watch Video Solution](#)

**118.** Which experimental evidence most clearly supports the suggestion that electrons have wave properties ?

- A. Diffraction
- B. Emission spectra
- C. Photoelectric effect
- D. Deflection of cathode rays by a magnet

**Answer: A**

 [Watch Video Solution](#)

**119.** Evidence for the electron arrangement in atoms has been obtained primarily from the study of :

- A. isotopes
- B. radioactivity
- C. stoichiometry
- D. atomic spectra

**Answer: D**

 [Watch Video Solution](#)

**120.** Green light has a wavelength that is slightly shorter than that of :

- A. gamma rays
- B. orange light

C. violet light

D. X - rays

**Answer: B**

 [Watch Video Solution](#)

121. The energy required to ionize a potassium ion is  $419 \text{ kJ mol}^{-1}$ . What is the longest wavelength of light that can cause this ionization ?

A. 285 nm

B. 216 nm

C. 200 nm

D. 107 nm

**Answer: A**

 [Watch Video Solution](#)

122. Which type of radiation has the highest frequency ?

- A. Infrared
- B. Microwave
- C. Ultraviolet
- D. X-rays

**Answer: D**



[Watch Video Solution](#)

123. Which statement concerning visible light is correct ?

- A. The product of wavelength and frequency is a constant for visible light in a vacuum.
- B. As the wavelength of light increases the energy of a photon increases.
- C. As the wavelength of light increases its amplitude also increases.

D. Green light has a higher frequency than blue light .

**Answer: A**



[Watch Video Solution](#)

## de Broglie and Heisenberg

1. What is the ratio of the de Broglie wavelength for electrons accelerated through 50 volts and 200 volts?

A. 3 : 10

B. 10 : 3

C. 1 : 2

D. 2 : 1

**Answer: D**



[Watch Video Solution](#)

2. For a ball of mass 198.6 g to be located within  $0.1\text{\AA}$ , what will be the minimum uncertainty in velocity ?

A.  $2.6 \times 10^{-17}$  cm/s

B.  $2.6 \times 10^{-18}$  m/s

C.  $2.6 \times 10^{-21}$  cm/s

D.  $2.6 \times 10^{-21}$  m/s

**Answer: C**



**Watch Video Solution**

3. In H-atom if  $r_1$  is the radius fo first Bohr orbit de-Broglie wavelength of an elecrtion in  $3^{rd}$  orbit is :

A.  $3\pi x$

B.  $6\pi x$

C.  $\frac{9x}{2}$

D.  $\frac{x}{2}$

**Answer: B**

 [Watch Video Solution](#)

4. The wavelength associated with a golf ball weighing 200 g and moving at a speed of 5m/h is of the order :

A.  $10^{-10}$  m

B.  $10^{-20}$  m

C.  $10^{-30}$  m

D.  $10^{-40}$  m

**Answer: C**

 [Watch Video Solution](#)

5. An  $\alpha$  - particle is accelerated through a potential difference of  $V$  volts from rest. The de-Broglie's wavelengths associated with it is.

A.  $\sqrt{\frac{150}{V}} \text{ \AA}$

B.  $\frac{0.286}{\sqrt{V}} \text{ \AA}$

C.  $\frac{0.101}{\sqrt{V}} \text{ \AA}$

D.  $\frac{0.983}{\sqrt{V}} \text{ \AA}$

**Answer: C**



**Watch Video Solution**

6. During an experiment an  $\alpha$ -particle and a proton are accelerated by same potential difference , their de Broglie wavelength ratio will be :

(Take mass of photon = mass of neutron)

A. 1 : 2

B. 1 : 4



C.  $1:2\sqrt{2}$

D.  $1:\sqrt{2}$

**Answer: C**

 [Watch Video Solution](#)

7. de Broglie wavelength of electron in second orbit of  $Li^{2+}$  ion will be equal to de Broglie's wavelength of electron in :

A.  $n = 3$  of H-atom

B.  $n = 4$  of  $C^{5+}$  ion

C.  $n = 6$  of  $Be^{3+}$  ion

D.  $n = 3$  of  $He^+$  ion

**Answer: B**

 [Watch Video Solution](#)

8. The wavelength of a charged particle . . . . . the square root of the potential difference through which it is accelerated .

A. is inversely proportional to

B. is directly proportional to

C. is independent of

D. is unrelated with

**Answer: A**



**Watch Video Solution**

9. The uncertainty in momentum of an electron is  $1 \times 10^{-5} \text{ kg} - \text{m} / \text{s}$ .

The uncertainty in its position will be ( $h = 6.62 \times 10^{-34} \text{ kg} = \text{m}^2 / \text{s}$ ).

A.  $1.05 \times 10^{-28} \text{ m}$

B.  $1.05 \times 10^{-26} \text{ m}$

C.  $5.27 \times 10^{-30} \text{ m}$

$$D. 5.52 \times 10^{-38} \text{ m}$$

**Answer: C**



**Watch Video Solution**

10. Uncertainty in position is twice the uncertainty in momentum .

Uncertainty in velocity is :

A.  $\sqrt{\frac{h}{\pi}}$

B.  $\frac{1}{2m} \sqrt{\frac{h}{\pi}}$

C.  $\frac{1}{2m} \sqrt{h}$

D.  $\sqrt{\frac{h}{4\pi}}$

**Answer: C**



**Watch Video Solution**

11. If wavelength is equal to the distance travelled by the electron in one second , then :

A.  $\lambda = \frac{h}{p}$

B.  $\lambda = \frac{h}{m}$

C.  $\lambda = \sqrt{\frac{h}{p}}$

D.  $\lambda = \sqrt{\frac{h}{m}}$

**Answer: D**



[Watch Video Solution](#)

12. Consider an electron in the  $n^{th}$  orbit of a hydrogen atom in the Bohr model . The circumference of the orbit can be expressed in terms of the de Broglie wavelength  $\lambda$  of the electron as :

A.  $(0.529)n\lambda$

B.  $\sqrt{n}\lambda$

C.  $(13.6)\lambda$

D.  $n\lambda$

**Answer: D**



[Watch Video Solution](#)

13. A particle X moving with a certain velocity has a de Broglie wavelength of  $1\text{\AA}$ . If particle Y has a mass of 25% that of X and velocity 75% that of X, de Broglie wavelength of Y will be :

A.  $3\text{\AA}$

B.  $5.33\text{\AA}$

C.  $6.88\text{\AA}$

D.  $48\text{\AA}$

**Answer: B**



[Watch Video Solution](#)

14. de Broglie wavelength of an electron after being accelerated by a potential difference of V volt from rest is :

A.  $\lambda = \frac{12.3}{\sqrt{h}} \text{ \AA}$

B.  $\lambda = \frac{12.3}{\sqrt{V}} \text{ \AA}$

C.  $\lambda = \frac{12.3}{\sqrt{E}} \text{ \AA}$

D.  $\lambda = \frac{12.3}{\sqrt{m}} \text{ \AA}$

**Answer: B**



**Watch Video Solution**

15. An electron in a hydrogen like atom makes transition from a state in which its de Broglie wavelength is  $\lambda_1$  to a state where its de Broglie wavelength is  $\lambda_2$  then wavelength of photon ( $\lambda$ ) generated will be :

A.  $\lambda = \lambda_1 - \lambda_2$

$$B. \lambda = \frac{4mc}{h} \left\{ \frac{\lambda_1^2 \lambda_2^2}{\lambda_1^2 - \lambda_2^2} \right\}$$

$$C. \lambda = \sqrt{\frac{\lambda_1^2 \lambda_2^2}{\lambda_1^2 - \lambda_2^2}}$$

$$D. \lambda = \frac{2mc}{h} \left\{ \frac{\lambda_1^2 \lambda_2^2}{\lambda_1^2 - \lambda_2^2} \right\}$$

**Answer: D**



**Watch Video Solution**

**16.** An  $\alpha$ -particle has initial kinetic energy of 25 eV and it is accelerated through a potential difference of 150 volt . If a photon has initial kinetic energy of 25 eV and it is accelerated through a potential difference of 25 volt , then find the approximate ratio of the final wavelengths associated with the proton and the  $\alpha$ -particle .

A. 5

B. 4

C. 3

D. 2

**Answer: A**



**Watch Video Solution**

17. Uncertainty in position of particle of 25 g in space is  $10^{-15}$  m . Hence ,  
uncertainty in velocity ( $ms^{-1}$ ) is :

(Planck's constant ,  $h = 6.63 \times 10^{-34}$  Js)

A.  $2.1 \times 10^{-18}$

B.  $2.1 \times 10^{-34}$

C.  $0.5 \times 10^{-34}$

D.  $5.0 \times 10^{-24}$

**Answer: A**



**Watch Video Solution**



18. The de-Broglie wavelength of a tennis ball mass  $60g$  moving with a velocity of  $10m$  per second is approximately :

A.  $10^{-33}m$

B.  $10^{-31}m$

C.  $10^{-16}m$

D.  $10^{-25}m$

**Answer: A**



[Watch Video Solution](#)

19. Uncertainty in the position of an electron mass ( $9.1 \times 10^{-31}kg$ ) moving with a velocity  $300ms^{-1}$  accurate upto  $0.001\%$  will be :

A.  $19.2 \times 10^{-2}m$

B.  $5.76 \times 10^{-2}m$

C.  $1.92m$

D.  $3.84 \times 10^{-2} \text{ m}$

**Answer: C**



**Watch Video Solution**

20. Calculate the wavelength ( in nanometer ) associated with a proton moving at  $1.0 \times 10^3 \text{ m/s}$  (Mass of proton =  $1.67 \times 10^{-27} \text{ kg}$  and  $h = 6.63 \times 10^{-34} \text{ Js}$ ) :

A. 0.40 nm

B. 2.5 nm

C. 14.0 nm

D. 0.032 nm

**Answer: A**



**Watch Video Solution**

21. In an atom , an electron is moving with a speed of 600 m/s with an accuracy of 0.05 % . The certainty with which the position of the electron can be located is ( $h = 6.6 \times 10^{-34} \text{kgm}^2 \text{s}^{-1}$  , mass of electron ,  $m_e = 9.1 \times 10^{-31} \text{kg}$ ):

- A.  $5.10 \times 10^{-3} \text{m}$
- B.  $1.75 \times 10^{-3} \text{m}$
- C.  $3.83 \times 10^{-3} \text{m}$
- D.  $1.52 \times 10^{-4} \text{m}$

**Answer: B**

 [Watch Video Solution](#)

22. An electron, in a hydrogen like atom , is in excited state. It has a total energy of -3.4 eV, find the de-Broglie wavelength of the electron.

- A.  $\sqrt{\frac{150}{3.4}} \text{\AA}$
- B.  $\sqrt{\frac{150}{6.8}} \text{\AA}$

C.  $\sqrt{\frac{150}{3.4}} \text{ nm}$

D.  $\sqrt{\frac{150}{6.8}} \text{ nm}$

**Answer: A**



**Watch Video Solution**

**23.** An electron, a proton and an alpha particle have kinetic energy of  $16E$ ,  $4E$  and  $E$  respectively. What is the qualitative order of their de Broglie wavelengths :-

A.  $\lambda_e > \lambda_p = \lambda_\alpha$

B.  $\lambda_p = \lambda_\alpha = \lambda_e$

C.  $\lambda_p > \lambda_e > \lambda_\alpha$

D.  $\lambda_e > \lambda_\alpha > \lambda_p$

**Answer: A**



**Watch Video Solution**

24. For which of the following particles will it be most difficult to experimentally verify the de Broglie relationship ?

A. A dust particle

B. An electron

C. A proton

D. An  $\alpha$ -particle projected closer to the center of the atom will experience a lesser deviation as compared to the particle projected away from the center.

**Answer: A**



[Watch Video Solution](#)

25. Photon having energy equivalent to the binding energy of 4th state of  $He^+$  ion is used to eject an electron from the metal with KE/2eV . If electron is further accelerated through a potential difference of 4V then

the minimum value of de Broglie wavelength associated with the electron is :

$$(h = 6.6 \times 10^{-34} \text{ J} \cdot \text{s}, m_e = 9.1 \times 10^{-31} \text{ kg}, 1 \text{ eV} = 1.6 \times 10^{-19} \text{ J})$$

- A.  $1.1 \text{ \AA}$
- B.  $5 \text{ \AA}$
- C.  $9.15 \text{ \AA}$
- D.  $11 \text{ \AA}$

**Answer: B**



[Watch Video Solution](#)

26. The uncertainty in position and velocity of the particle are  $0.1 \text{ nm}$  and  $5.27 \times 10^{-27} \text{ ms}^{-1}$  respectively. Then the mass of the particle is :  
( $h = 6.625 \times 10^{-34} \text{ Js}$ ).

- A. 200g
- B. 300 g

C. 100 g

D. 1000 g

**Answer: C**



[Watch Video Solution](#)

27. The de Broglie wavelength of an object of mass 33 g moving with a velocity of  $200\text{ms}^{-1}$  is of the order of :

A.  $10^{-31}\text{m}$

B.  $10^{-34}\text{m}$

C.  $10^{-37}\text{m}$

D.  $10^{-41}\text{m}$

**Answer: B**



[Watch Video Solution](#)

28. For an electron whose x-positional uncertainty is  $1.0 \times 10^{-10}$  m . The uncertainty in the x - component of the velocity in  $ms^{-1}$  will be the order of :

- A.  $10^6$
- B.  $10^9$
- C.  $10^{12}$
- D.  $10^{15}$

**Answer: A**



[Watch Video Solution](#)

29. What is the velocity of an electron ( $m = 9.11 \times 10^{-28}$  g) that exhibits a de Broglie wavelength of 10.0 nm ?

$$[1J = 1kg \cdot m^2 \cdot s^{-2}]$$

- A.  $72.7m \cdot s^{-1}$



B.  $270m \cdot s^{-1}$

C.  $7.27 \times 10^4 m \cdot s^{-1}$

D.  $7.27 \times 10^6 m \cdot s^{-1}$

**Answer: C**



**Watch Video Solution**

**30.** A particle moving with a velocity of  $6.626 \times 10^7$  m/s has a de Broglie wavelength of  $1\text{\AA}$  in a circular path of radius  $0.529\text{\AA}$ . The angular momentum of particle is ( $h = 6.626 \times 10^{-34} J \times \text{sec}$ ):

A.  $3.5 \times 10^{-34} \text{kgm}^2 \text{sec}^{-1}$

B.  $3.5 \times 10^{-35} \text{kgm}^2 \text{sec}^{-1}$

C.  $3.5 \times 10^{-31} \text{kgm}^2 \text{sec}^{-1}$

D.  $1.053 \times 10^{-34} \text{kgm}^2 \text{sec}^{-1}$

**Answer: A**



[Watch Video Solution](#)

31. At temperature  $T$ , the average kinetic energy of any particles is  $\frac{3}{2} kT$ .

The de Broglie wavelength follows the order :

- A. Visible photon  $>$  Thermal electron  $>$  Thermal neutron
- B. Thermal proton  $>$  Thermal electron  $>$  Visible photon
- C. Visible photon  $>$  Thermal neutron  $>$  Thermal electron
- D. Thermal proton  $>$  Visible photon  $>$  Thermal electron

**Answer: A**



[Watch Video Solution](#)

32. What is the de Broglie wavelength of electron, in hydrogen atom, moving in an orbit having maximum magnetic quantum no.  $+2$ ?

- A.  $9.97\text{\AA}$

B.  $2.8\text{\AA}$

C.  $6.12\text{\AA}$

D.  $3.32\text{\AA}$

**Answer: A**



**Watch Video Solution**

**33.** What is the potential drop through which an electron , with a de Broglie wavelength of  $1.5\text{\AA}$  , should be accelerated , if its de Broglie wavelength should be reduced to  $1\text{\AA}$  ?

A. 110 volts

B. 70 volts

C. 83 volts

D. 55 volts

**Answer: C**

34. If  $E_1$ ,  $E_2$  and  $E_3$  represent respectively the kinetic energies of an electron, an alpha particle and a proton each having same de Broglie wavelength then :

A.  $E_1 > E_3 > E_2$

B.  $E_2 > E_3 > E_1$

C.  $E_1 > E_2 > E_3$

D.  $E_1 = E_2 = E_3$

**Answer: A**

35. Which of the following matter waves will have the shortest wavelength, if travelling with same kinetic energy ?

A. Electrons

B. Alpha particle

C. Neutrons

D. Proton

**Answer: B**



**Watch Video Solution**

**36.** If uncertainty in position and momentum are equal then uncertainty in velocity is.

A.  $\sqrt{\frac{h}{\pi}}$

B.  $\sqrt{\frac{h}{2\pi}}$

C.  $\frac{1}{2m} \sqrt{\frac{h}{\pi}}$

D. zero

**Answer: C**

 [Watch Video Solution](#)

37. What will be de Broglie's wavelength of an electron moving with a velocity of  $1.2 \times 10^5 \text{ m s}^{-1}$  ?

A.  $6.044 \times 10^{-9} \text{ m}$

B.  $3.133 \times 10^{-37} \text{ m}$

C.  $6.626 \times 10^{-9} \text{ m}$

D.  $6.018 \times 10^{-7} \text{ m}$

**Answer: A**

 [Watch Video Solution](#)

38. A photon of wavelength 6.2 nm is used to emit an electron from the ground state of  $\text{Li}^{2+}$  . Calculate de Broglie wavelength of the emitted electron .

A.  $\cong 16 \text{ nm}$

B.  $\cong 16 \text{ "Å"}$

C.  $\cong 1.4 \text{ "Å"}$

D.  $\cong 1 \text{ nm}$

**Answer: C**



**Watch Video Solution**

**39.** An electron is located with an uncertainty equal to its uncertainty in velocity (symbols have usual meaning)?

A.  $\sqrt{\frac{h}{4\pi}}$

B.  $\frac{h}{4\pi}$

C.  $\frac{1}{2m} \sqrt{\frac{h}{\pi}}$

D. Not possible

**Answer: D**

 [Watch Video Solution](#)

40. A particle of  $\frac{e}{m}$  ratio equal to  $4 \times 10^5$  coul/kg is accelerated from rest through a potential difference of 20 volt . The speed of particle is :

- A. 4.0 m/s
- B. 4000 km/s
- C. 4000 cm/s
- D. 4000 m/s

**Answer: D**

 [Watch Video Solution](#)

41. The de Broglie wavelength of an electron moving in a circular orbit is  $\lambda$  . The minimum radius of orbit is :

- A.  $\frac{\lambda}{4}$



B.  $\frac{\lambda}{2\pi}$

C.  $\frac{\lambda}{4\pi}$

D.  $\frac{\lambda}{3\pi}$

**Answer: B**



**Watch Video Solution**

42. An electron , practically at rest , is initially accelerated through a potential difference of 100 volts . It then has a de Broglie wavelength =  $\lambda_1 \text{ \AA}$  . It then gets retarded through 19 volts and then has wavelength  $\lambda_2 \text{ \AA}$  . A further retardation through 32 volts changes the wavelength to  $\lambda_3$  . What is  $\frac{\lambda_3 - \lambda_2}{\lambda_1}$  ?

A.  $\frac{20}{41}$

B.  $\frac{10}{63}$

C.  $\frac{20}{63}$

D.  $\frac{10}{41}$

**Answer: C**



**View Text Solution**

**43.** Uncertainty in position of a hypothetical subatomic particle is  $1\text{\AA}$  and uncertainty in velocity is  $\frac{3.3}{4\pi} \times 10^5$  m/s then the mass of the particle is approximately ( $h = 6.6 \times 10^{-34}$  Js) :

A.  $2 \times 10^{-28}$  kg

B.  $2 \times 10^{-27}$  kg

C.  $2 \times 10^{-29}$  kg

D.  $4 \times 10^{-29}$  kg

**Answer: C**



**Watch Video Solution**

1. The radial probability distribution curve of an orbital of H has '4' local maxima . If orbital has 3 angular node then orbital will be :

A. 7 f

B. 8f

C. 7d

D. 8d

**Answer: A**



[View Text Solution](#)

2. The Schrodinger wave equation for hydrogen atom of 4s- orbital is given by :

$$\Psi(r) = \frac{1}{16\sqrt{4}} \left(\frac{1}{a_0}\right)^{3/2} [(\sigma^2 - 1)(\sigma^2 - 8\sigma + 12)] e^{-\sigma/2} \quad \text{where}$$

$a_0 = 1^{st}$  Bohr radius and  $\sigma = \frac{2r}{a_0}$  . The distance from the nucleus where

there will be no radial node will be :

A.  $r = \frac{a_0}{2}$

B.  $r = 3a_0$

C.  $r = a_0$

D.  $r = 2a_0$

**Answer: D**

 [Watch Video Solution](#)

**3. Orbital angular momentum of 3s and 3p are :**

A.  $\frac{h}{2\pi}, \frac{h}{2\pi}$

B.  $\frac{h}{\sqrt{2}\pi}, \frac{h}{\sqrt{2}\pi}$

C.  $0, \frac{\sqrt{2}h}{\pi}$

D.  $0, \frac{h}{\sqrt{2}\pi}$

**Answer: D**

 [Watch Video Solution](#)

4. The Schrodinger wave equation for hydrogen atom is

$$\Psi_{2s} = \frac{1}{4\sqrt{2\pi}} \left(\frac{1}{a_0}\right)^{3/2} \left(2 - \frac{r}{a_0}\right) e^{-r/a_0}, \text{ where } a_0 \text{ is Bohr's radius.}$$

If the radial node in 2s be at  $r_0$ , then  $r_0$  would be equal to :

A.  $\frac{a_0}{2}$

B.  $2a_0$

C.  $\sqrt{2}a_0$

D.  $\frac{a_0}{\sqrt{2}}$

**Answer: B**



[Watch Video Solution](#)

5. Which of the following options is correct regarding True (T) or False(F) nature of the statements.

Statement - 1 : Angular momentum quantum number determines the three dimensional shape of the orbital .

Statement-2 : No two orbitals can have exactly same wave function .

Statement - 3 : The principal quantum number determines the orientation and energy of the orbital .

Statement - 4 : The orbital wave function of one electron species which obeys Pauli's exclusion principle will be dependent on all the four quantum numbers .

A. Statement-2 and statement-4 are the only correct statements.

B. Statement-3 is the only incorrect statement .

C. Statement-1 and 2 are the only correct statements.

D. Statement-3 and 4 are the only correct statements .

**Answer: C**

 [Watch Video Solution](#)

6. For an orbital , having no planar angular nodes following the equation :

$$\Psi_{(r)} = Ke^{-r/K'} \cdot r^2(K'' - r)$$

Identify the orbital :

A.  $4d_{z^2}$

B.  $2s$

C.  $3d_{z^2}$

D.  $4d_{xy}$

**Answer: A**



**Watch Video Solution**

7. Choose the correct statement(s) .

A. The orbital wave function or  $\Psi$  for an electron has no physical meaning

B. Square of wave function ( $\Psi^2$ ) at a point gives the probability density of the electron at that point .

C. Boundary surface diagrams of constant probability density for different orbitals give a fairly good representation of the shapes of

the orbitals .

D. All of the above

**Answer: D**

 [Watch Video Solution](#)

8. Which orbital is represented by the complete wave function ,  $\Psi_{420}$  ?

A. 4s

B. 4p

C. 4d

D. 4f

**Answer: C**

 [Watch Video Solution](#)



9. The orbitals amongst the following , having three nodal surfaces:

A. 1s

B. 2s

C. 3s

D. 4s

**Answer: B**



[Watch Video Solution](#)

10.  $\Psi(r) = ke^{-r/k_1} \cdot r^2 (r^2 - k_2 r + k_3)$  . If the orbital has no nodal plane ,

then , orbital can be :

A.  $5d_{xy}$

B.  $5d$

C.  $4d_{z^2}$

D.  $4p_x$

**Answer: A**



**Watch Video Solution**

11. For the wave function

$$\Psi = \frac{\sqrt{2}}{81\sqrt{\pi}a_0^{3/2}} \left[ 6 - \frac{r}{a_0} \right] \frac{r}{a_0} \times e^{-r/3a_0} \sin\theta \cos\phi$$

Identify the orbital .

A.  $3p_x$

B.  $3p_y$

C.  $3p_z$

D.  $6p_x$  or  $6p_y$  or  $6p_z$

**Answer: B**



**Watch Video Solution**

12. For an orbital ,

$$\Psi_{300} = \frac{1}{81\sqrt{3}\pi} \left(\frac{z}{a_0}\right)^{3/2} [27 - 18u + 2u^2] \exp\left(\frac{-u}{3}\right) \text{ where } u = \frac{zr}{a_0}$$

What is the maximum radial distance of node from nucleus of  $He^+$  ion ?

A.  $(3 + \sqrt{3}) \frac{3a_0}{2}$

B.  $(3 + \sqrt{3}) \frac{3a_0}{4}$

C.  $a_0$

D.  $\frac{a_0}{2}$

**Answer: B**

 [Watch Video Solution](#)

13. Given wave function represents which orbital of hydrogen  $\Psi = \frac{1}{4}$

$$\frac{1}{\sqrt{2}\pi} \left(\frac{r}{a_0}\right)^{5/2} e^{-r/2a_0} \cos \theta$$

(where  $\theta$  = angle from z-axis)

A.  $2P_y$

B.  $2P_z$

C.  $3P_y$

D.  $3P_z$

**Answer: B**

 [Watch Video Solution](#)

14. An orbital is found to contain total nodes = 3 and radial nodes = 1.

Orbital angular momentum for the electron present in this orbital :

A. 0

B.  $\frac{h}{2\pi} \sqrt{6}$

C.  $\frac{h}{2\pi} \sqrt{2}$

D.  $\frac{h}{4\pi} \sqrt{6}$

**Answer: B**

 [Watch Video Solution](#)

15. What is the maximum degeneracy of a level of H-atom, where  $e^-$  has energy,  $E_n = -\frac{Rhc}{9}$ ?

- A. 1
- B. 3
- C. 5
- D. 9

**Answer: D**

 [Watch Video Solution](#)

16. Which statement is not true, regarding 2s orbital?

- A. Number of radial nodes is greater than zero
- B. Angular nodes is equal to zero.
- C.  $\Psi(0, \phi) = \text{constant}$ .

D. Probability density is zero at nucleus.

**Answer: D**



[Watch Video Solution](#)

17. The number of radial nodes for 3s and 2p orbitals are respectively:

A. 2,0

B. 0,2

C. 1,2

D. 2,1

**Answer: A**



[Watch Video Solution](#)

18. For an electron, with  $n=3$  has only one radial node.

The orbital angular momentum of the electron will be :

A. 0

B.  $\sqrt{6} \frac{h}{2\pi}$

C.  $\sqrt{2} \frac{h}{2\pi}$

D.  $3 \left( \frac{3}{2\pi} \right)$

**Answer: C**



**Watch Video Solution**

19. Angular wave function of  $P_x$  orbital is : (Given :  $\theta$  is angle from z-axis)

A.  $\left( \frac{3}{4\pi} \right)^{1/2} \sin \theta \sin \phi$

B.  $\left( \frac{3}{4\pi} \right)^{1/2} \sin \theta \cos \phi$

C.  $\left( \frac{3}{4\pi} \right)^{1/2} \cos \theta$

D.  $\left(\frac{15}{4\pi}\right)^{1/2} \sin \theta \cos \theta \cos \phi$

**Answer: B**



[Watch Video Solution](#)

20. How many angular nodes does a d-orbital possess?

A. 1

B. 2

C. 3

D. 4

**Answer: B**



[Watch Video Solution](#)

21. How many radial nodes does a 3d-orbital possess?



A. 0

B. 1

C. 2

D. 3

**Answer: A**

 [Watch Video Solution](#)

**22. Which quantum number is not related with Schrodinger equation :-**

A. Principal

B. Azimuthal

C. Magnetic

D. Spin

**Answer: D**

 [Watch Video Solution](#)

23. Question : Is the orbital of hydrogen atom  $3p_x$  ?

STATE 1 : The radial function of the orbital is

$$R(r) = \frac{1}{9\sqrt{6}a_0^{3/2}}(4 - \sigma)\sigma e^{-\sigma/2}, \sigma = \frac{r}{2}$$

STATE 2 : The orbital has 1 radial node & 0 angular node.

- (a). Statement (1) alone is sufficient.
- (b). Statement (2) alone is sufficient
- (c). Both together is sufficient
- (d). Neither is sufficient

- A. Statement (1) alone is sufficient.
- B. Statement (2) alone is sufficient.
- C. Both together is sufficient.
- D. Neither is sufficient.

**Answer: B**



[Watch Video Solution](#)

24. The quantum numbers  $+\frac{1}{2}$  and  $-\frac{1}{2}$  for the electron spin represent

A. rotation of the electron in clockwise and anticlockwise direction respectively.

B. rotation of the electron in anticlockwise and clockwise direction respectively.

C. magnetic moment of the electron pointing up and down respectively.

D. two quantum mechanical spin states which have no classical analogue.

**Answer: D**



**Watch Video Solution**

**Reasoning Type**

1. Assertion (A) : If the potential difference applied to an electron is made 4 time , the de Broglie wavelength associated is halved

Reason (R ) : On making potential difference 4 times , velocity is doubled and hence  $\lambda$  is halved

 [Watch Video Solution](#)

2. Statement : Wave number of a spectral line for an electronic transition is quantised .

Explanation : Wave number is directly proportional to the velocity of electron undergoing the transition .

 [Watch Video Solution](#)

3. Humphry series discovered in  $H$  – atomic spectra has lowest energy radiations among all series.

Lowest state for this series is  $n_1 = 6$ .

 [Watch Video Solution](#)

4. A photon of energy  $12eV$  can break three molecules of  $A_2$  into atoms which has bond dissociation energy of  $4eV / \text{molecule}$ .

Total energy is conserved and interaction is always one to one between photon and molecule.

 [Watch Video Solution](#)

5. Statement-1: For 1s-orbital the probability density is maximum at the nucleus.

Statement-2: Nuclear volume is small.

 [Watch Video Solution](#)

6. Statement-1: For a 2p-orbital the probability density function is zero on the plane where the two lobes touch each other.

Statement-2: Such a plane is called nodal plane.



[Watch Video Solution](#)

7. Statement-1: The angular momentum of  $e^-$  in  $4f$  orbital is  $\sqrt{3}\frac{h}{\pi}$ .

Statement-2: Angular momentum of electron in 4 th orbit is  $\frac{2h}{\pi}$ .



[Watch Video Solution](#)

8. Statement-1: K.E. of photoelectrons increases with increases in frequency of incident ligh ( $V > V_0$ ).

Statement -2: Whenever intensity of light is increases the magnitude of photocurrent always increases.



[Watch Video Solution](#)

9. Satement-1: Spin quantum number can have two values  $+\frac{1}{2}$  and  $-\frac{1}{2}$ .

Statement-2: + ve and -ve signs signify the positive and negative wave functions.



[Watch Video Solution](#)

10. Statement-1: The observed magnetic moment of  $Fe^{2+}$  is between 5.3-5.5 B.M. instead of 4.9 B.M.

Statement-2: Magnetic moment depends not only on spin but also on orbital angular momentum of  $e^-$ .



[Watch Video Solution](#)

11. Statement-1: Emitted radiation will fall in visible range when an electron jumps from higher level of  $n = 2$  in  $Li^{+2}$  ion.

Statement-2: Balmer series radiations belong to visible range in all H-atoms.



[Watch Video Solution](#)

Multiple Objective Type

1. Monochromatic light of wavelength  $\lambda$  strikes a metal surface with intensity 'a' emitting 'b' electrons per second with 'c' as the maximum kinetic energy of electrons .Which of the following options will happen if 'a' is halved without changing wavelength and area of exposure?

- A. Photo emission will stop.
- B. New maximum kinetic energy will be same as 'c'
- C. Number of photoelectrons emitted per second will be less than 'b'
- D. Rate at which charge will be acquired on metal will decrease.

**Answer: B::C::D**

 [Watch Video Solution](#)

2. Which of the statement (s) is / are correct regarding cathode rays?

- A. They come out normal to the surface of cathode.
- B. They travel in straight line in presence of electric field.



C. The  $\frac{e}{m}$  ratio depends on the nature of gas

D. They are stream of negatively charged particles.

**Answer: A::D**

 [Watch Video Solution](#)

3. Which of the following wavelengths are not possible for an electron of  $He^+$  in any of its Bohr orbit?

[Assume:  $h = 6.626 \times 10^{-34} J - sec$ ,  $M_e = 9.1 \times 10^{-31}$ ]

A.  $1.5 \text{ \AA}$

B.  $\sqrt{\frac{150}{10.2}} \text{ \AA}$

C.  $\sqrt{\frac{150}{3.5}} \text{ nm}$

D.  $\frac{h}{m_e \times 3 \times 10^8} M$

**Answer: A::B::C::D**

 [Watch Video Solution](#)

4. Chose the correct on the basis of Bohr's theory

A. Velocity of electron  $\propto \frac{1}{n}$

B. Frequency of revolution  $\propto \frac{1}{n^3}$

C. Radius of orbit  $\propto n^2 Z$

D. Force on electron  $\propto \frac{1}{n^4}$

Answer: A::B::D



Watch Video Solution

5. The spectrum of  $He$  is expected to be similar to that of



B. He

C. H

D. Na

**Answer: A::C**



**Watch Video Solution**

6. A hydrogen-like atom has ground state binding energy  $122.4\text{eV}$ . Then :

- (a). its atomic number is 3
- (b). an electron of  $90\text{eV}$  can excite it to a higher state
- (c). an  $80\text{eV}$  electron cannot excite it to a higher state
- (d). an electron of  $8.2\text{eV}$  and a photon of  $91.8\text{eV}$  are emitted when a  $100\text{eV}$  electron interacts with it

A. Its atomic number is 3

B. a photon of 90 eV can excite it to a higher state

C. a 80 eV photon cannot excite it to a higher state

D. to excite an  $e^-$  minimum 91.8 eV photon is required

**Answer: A::C::D**



**Watch Video Solution**

7. A sodium street light gives off yellow light that has a wavelength of 600 nm.

Then (For energy of a photon take  $E = \frac{12400\text{eV} - \text{\AA}}{\lambda(\text{\AA})}$  :

- A. frequency of this light is  $7 \times 10^{14} \text{s}^{-1}$
- B. frequency of this light is  $5 \times 10^{14} \text{s}^{-1}$
- C. wave number of the light is  $3 \times 10^6 \text{m}^{-1}$
- D. energy of the photon is approximately 2.07 eV

**Answer: B::D**



[View Text Solution](#)

8. The qualitative order of de Broglie wavelength for electron, proton and  $\alpha$  particle is  $\lambda_e > \lambda_P > \lambda_\alpha$  :

- A. if kinetic energy is same for all particles

- B. if the accelerating potential difference 'V' is same for all the particles (from rest)
- C. if velocities are same for all particles
- D. never possible

**Answer: A::B::C**

 [Watch Video Solution](#)

9. If there are only two H-atoms each is in 3rd excited state then:

- A. maximum number of different photons emitted is 4
- B. maximum number of different photons emitted is 3
- C. minimum number of different photons emitted is 1
- D. minimum number of different photons emitted is 2

**Answer: A::C**

 [View Text Solution](#)

10. In a H- like sample electron makes transition from 4th excited state of 2nd state then:

- A. 10 different spectral lines are observed
- B. 6 different spectral lines are observed
- C. number of lines belonging to the Balmer series is 3
- D. number of lines belonging to Paschen series is 2

**Answer: B::C::D**



[Watch Video Solution](#)

11. Identify the correct statement (s)

- A. Wavelength associated with the 1 kg ball moving with the velocity  $100 \text{ m/s}$  can't be calculated.

B. Wave nature of the running trains is difficult to observe because wavelength is extremely small.

C. Wavelength associated with the electron can be calculated using the formulae  $E = \frac{hc}{\lambda}$ .

D. If an electron is accelerated through 20 V potential difference and if it has already 5 eV kinetic energy then wavelength of the electron is approximately  $\sqrt{6}\text{\AA}$

**Answer: B::D**

 [Watch Video Solution](#)

12. 1st excitation potential for the H-like (hypothetical) sample is 24 V.

Then:

A. ionisation energy of the sample is 36 eV

B. ionisation energy of the sample is 32 eV

C. binding energy of 3rd excited state is 2 eV

D. 2nd excitation potential of the sample is  $\frac{32 \times 8}{9} V$

**Answer: B::C::D**



**Watch Video Solution**

**13.** From the  $\alpha$  – particle scattering experiment, Rutherford concluded that:

A.  $\alpha$  – particle can come within a distance of the order of  $10^{-14}m$

from the nucleus

B. the radius of the nucleus is less than  $10^{-14} m$

C. scattering followed Coulomb's law

D. the positively charged parts of the atom move with extremely high

velocities

**Answer: a,b,c**



14. Which of the following statement (s) are incorrect?

A. Photons having energy 400 kJ will break 4 mole bonds of a molecule

$A_2$  where A-A bond dissociation energy is  $100\text{kJ/mol}$ .

B. Two bulbs are emitting light having wavelength  $2000\text{\AA}$  and  $3000\text{\AA}$

respectively. If the bulbs A and B are 40 watt and 30 watt

respectively then the ratio of no. of photons emitted by A and B per

day is  $\frac{1}{2}$ .

C. When an electron make transition from lower to higher orbit

photon is emitted.

D. 4 eV is sufficient to excite an  $e^-$  from ground state of H-atom.

Answer: a,b,c,d

15. Bohr's theory is not applicable to-

(a). He

(b).  $Li^{2+}$

(c).  $He^{2+}$

(d). the H-atom

A. He

B.  $Li^{2+}$

C.  $He^{2+}$

D. the H-atom

**Answer: a,c**



**Watch Video Solution**

16. In which transition, one quantum of energy is emitted -

(a).  $n = 4 \rightarrow n = 2$

(b).  $n = 3 \rightarrow n = 1$

(c).  $n = 4 \rightarrow n = 1$

(d).  $n = 2 \rightarrow n = 1$

A.  $n = 4 \rightarrow n = 2$

B.  $n = 3 \rightarrow n = 1$

C.  $n = 4 \rightarrow n = 1$

D.  $n = 2 \rightarrow n = 1$

**Answer: a,b,c,d**



**Watch Video Solution**

**17.** The magnitude of the spin angular momentum corresponding to an electron in Balmer transition inside a hydrogen atom can be:

A.  $S = \sqrt{s(s+1)} \frac{h}{2\pi}$

B.  $S = s \frac{h}{2\pi}$

C.  $S = \frac{\sqrt{3}}{2} \times \frac{h}{2\pi}$

$$D. S = \pm \frac{1}{2} \times \frac{h}{2\pi}$$

**Answer: a,c**



**Watch Video Solution**

**18.** The change in orbital angular momentum corresponding to an electron transition inside a hydrogen atom can be-

(a).  $\frac{h}{4\pi}$

(b).  $\frac{h}{\pi}$

(c).  $\frac{h}{2\pi}$

(d).  $\frac{h}{8\pi}$

A.  $\frac{h}{4\pi}$

B.  $\frac{h}{\pi}$

C.  $\frac{h}{2\pi}$

D.  $\frac{h}{8\pi}$

**Answer: b,c**



[Watch Video Solution](#)

19. In a hydrogen like sample two different types of photons A and B are produced by electronic transition. Photon B has its wavelength in infrared region. If photon A has more energy than B, then the photon may belong to the region:

- A. ultraviolet
- B. visible
- C. infrared
- D. far infrared

**Answer: a,b,c**



[Watch Video Solution](#)

20. In Bohr's model of the hydrogen atom:

- A. The radius of the  $n$ th orbit is inversely proportional to  $n^2$ .
- B. The total energy of the electron in the  $n$ th orbit is inversely proportional to ' $n$ '.
- C. The angular momentum of the electron in an orbit is an integral multiple of  $h / 2\pi$ .
- D. The magnitude of potential energy of the electron in any orbit is greater than its KE.

**Answer: c,d**

 [Watch Video Solution](#)

**21. Which of the following statement (s) is /are true?**

- A. If H-atoms are in 3rd energy level then number of maximum different spectral lines produced by 2 atoms will be equal to number of maximum spectral lines produced by 3 H-atoms.

- B. For third excited state,  $He^+$  ions and maximum number of different spectral line produced by 4 H-atoms are equal.
- C. Energy evolved from 3rd to 2nd energy level transition in  $He^+$  can be used to ionise  $Li^{2+}$  from ground level.
- D. Energy evolved by a  $He^+$  ion which is in its 1st excited state can ionise a hydrogen atom which is in its ground state.

**Answer: a,b,d**



**Watch Video Solution**

**22.** Which of the following statements (regarding an atom of H ) are correct?

- A. Kinetic energy of the electron is maximum in the first orbit
- B. Potential energy of the electron is maximum in the first orbit
- C. Radius of the second orbit is four times the first orbit

D. Various energy levels are equally spaced on energy scale

**Answer: a c**

 [Watch Video Solution](#)

**23.** Choose the correct statements from the following

A. A node is a point in space where the wave function ( $\Psi$ ) has zero amplitude.

B. Total number of nodes in an orbital is equal to  $(n-1)$ .

C.  $\Psi^2$  represents the probability density of finding an electron.

D. Total no. of angular nodes in  $2p_x$  orbital is one .

**Answer: a b c d**

 [Watch Video Solution](#)



24. If electron of hydrogen atom is replaced by another particle of same charge but of double mass then:

- A. Radii of orbits will increase
- B. Ionisation energy will increase
- C. Velocity of new particle will be more
- D. Energy gap between two levels will be doubled

Answer: b d



Watch Video Solution

25. The wave function of  $3s$  and  $3p_z$  orbitals are given by :

$$\Psi_{3s} = \frac{1}{9\sqrt{3}} \left( \frac{1}{4\pi} \right)^{1/2} \left( \frac{Z}{\sigma_0} \right)^{3/2} (6 - 6\sigma + \sigma)e^{-\sigma/2}$$

$$\Psi_{3s_z} = \frac{1}{9\sqrt{6}} \left( \frac{3}{4\pi} \right)^{1/2} \left( \frac{Z}{\sigma_0} \right)^{3/2} (4 - \sigma)\sigma e^{-\sigma/2} \cos \theta,$$

$$\sigma = \frac{2Zr}{n\alpha_0}$$

where  $\alpha_0 = 1st$  Bohr radius ,  $Z =$  charge number of nucleus,  $r =$  distance

from nucleus.

From this we can conclude:

- A. Total number of nodal surface is same for 3s and  $3p_x$  orbitals
- B. The angular nodal surface of  $3p_z$  orbital occur at  $\theta = \frac{\pi}{2}$
- C. The radial nodal surface of 3s and  $3p_z$  orbitals are at equal distance from nucleus.
- D. 3s electrons have greater penetrating power into the nucleus compared to  $3p_z$  electron.

**Answer: a b d**

 [Watch Video Solution](#)

**26.** The orbital angular momentum of an electron is

$\sqrt{3} \frac{h}{\pi}$ . Which of the following should not be the permissible value of orbit angular momentum of this electron revolving in Bohr orbit ?

A.  $\frac{h}{2\pi}$

B.  $\frac{h}{\pi}$

C. 3.  $\frac{h}{2\pi}$

D. 2.  $\frac{h}{\pi}$

**Answer: a b c**



**Watch Video Solution**

**27.** Select correct statement(s) about photoelectric effect.

- A. If green light ejects photoelectron from metal M then red light can never eject photoelectrons from metal M.
- B. If green light ejects photoelectron from metal M then red light may not eject photoelectrons even if it has high intensity for metal M.
- C. If green light ejects photoelectron from metal M with low photocurrent then more photo intense blue light must have high photocurrent for metal M.

D. If green light ejects photoelectron then blue light must eject photoelectron with more energy for metal M.

**Answer: b c d**



**Watch Video Solution**

**28.** Bohr model can be applied on :

A. H atom

B.  $He^+$  ion

C.  $H^-$  ion

D.  $Li^{2+}$  ion

**Answer: a b d**



**Watch Video Solution**

29. Which of the following statements (s) *is / are* true?

A.  $\frac{(U_{rms}O_2TK)}{(U_{av}O_2TK)}$ , *is fixed*

B. Wavelength of ejected photoelectron can be calculated by

$$\lambda = \frac{hc}{E}, \text{ Where } E \text{ is kinetic energy of ejected photoelectron.}$$

C. Ozone gas can be absorbed by alkaline pyrogallol solution.

D. Oxygen gas can be absorbed by alkaline pyrogallol solution.

Answer: a d



Watch Video Solution

30. For two Bohr orbits  $n_1$  and  $n_2$  which follow the relationships,

$$(n_2^2 = n_1^2) = 21 \text{ and } (n_2 - n_1) = 3.$$

If an electron makes transition from  $n_2$  to  $n_1$  directly then :

A. third longest wavelength of Balmer series is emitted

B. longest frequency of Lyman series is emitted

C. longest frequency of Balmer series is emitted

D. only one spectral line is emitted

**Answer: a d**



[Watch Video Solution](#)

**31.** Select the correct statement about electromagnetic waves.

A. They have different wavelength velocity and frequency in vacuum.

B. No medium is required for their propagation.

C. perpendicular constant electric and magnetic field generates it .

D. It consists of transverse vibrations produced from a combination of electric and magnetic fields perpendicular to each other .

**Answer: b d**



[Watch Video Solution](#)

32. Whenever a hydrogen atom emits photon in the Balmer series:

- A. it may emit another photon in the Balmer series
- B. it may emit another photon in the Lyman series
- C. the second photon if emitted will have a wavelength of about 122 nm
- D. it may emit a second photon, but the wavelength of this photon cannot be predicted

**Answer: b c**



[Watch Video Solution](#)

33. Radiational wavelength ( $\lambda$ ) =  $124nm$  falls on a metallic surface then the kinetic energy of the ejected photo electron(s) can be : [Given that threshold wavelength ( $\lambda_0$ ) =  $248nm$ ]

- A. 1 eV

B. 2 eV

C. 3 eV

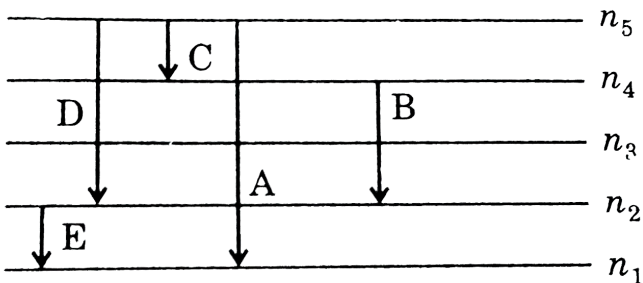
D. 5 eV

Answer: a b c d



Watch Video Solution

34. For a H-like atom which Bohr's model some spectral lines were observed as shown. If it is known that line E belongs to visible region then the correct statement(s) *is/are* for following transition.



A. There cannot be any line in UV region

B. only line possibly belonging to ultraviolet region is A



C. Line having shortest wavelength is A

D. Line having least energy is C.

**Answer: c d**

 [Watch Video Solution](#)

**35. Select the correct statement .**

A. Over a boundary surface, value of probability density  $|\Psi|^2$  is constant for an orbital.

B. Probability of finding an electron is 100% in an orbital.

C. Number of angular nodes are  $n - l - 1$ .

D. For 1s orbital the probability density is maximum at the nucleus.

**Answer: a d**

 [Watch Video Solution](#)

36. Choose the correct statements regarding ' $\Psi$ '.

- A. If probability density  $|\Psi|^2$  is also constant over the surface.
- B. The boundary surface of  $|\Psi|^2$  and  $|\Psi|$  are identical.
- C. Boundary surface diagram for an s-orbital is actually a sphere centered on the nucleus.
- D. 2s-orbital probability density first decreases sharply to zero and again starts increasing.

Answer: a b c d



Watch Video Solution

37. (i) A plot of  $4\pi r^2 R^2$  vs  $r$  has a total three maximas.

(ii) The orbital has two angular nodes.

(iii) One angular node is the XY plane.

The orbital satisfying the above three conditions cannot be:

A.  $3s$

B.  $4p_z$

C.  $5d_{xy}$

D.  $5d_{x^2-y^2}$

**Answer: a b c d**

 [Watch Video Solution](#)

**38.** The orbit angular momentum of  $3d$  and  $4d$  are:

 [Watch Video Solution](#)

**39.** Identify the correct statement (s) regarding  $3p_z$  orbital.

A. Angular part of wave function has  $0 = 90^\circ$

B. No. of maximum in  $R^2(r)_{us}(r)$  curve is 3.

C. Total 3 nodal planes are possible.

D. No. of radial nodes = 1

**Answer: a d**

 [Watch Video Solution](#)

**40.** Maximum probability region ( $r_{\max}$  values) for an orbital increases as 'r' value the probability becomes maximuml then it falls down with the increases of r More than one value of 'r' appear in all orbitals, except:

A. 1s

B. 2p

C. 3d

D. 4f

**Answer: a b c d**

 [Watch Video Solution](#)

41. If  $r_{\max}$  represents the longest maximum probability region and  $\langle r_{\max} \rangle$  represents average  $r_{\max}$ , then which of the following holds true for multi-electron species?

- A.  $r_{\max}$  order:  $3s > 3p > 3d$
- B.  $\langle r_{\max} \rangle$  order:  $3s < 3p < 3d$
- C. penetrating power:  $3s > 3p > 3d$
- D.  $r_{\max}$  order:  $3s < 3p < 3d$

Answer: a b c d

 [View Text Solution](#)

42. Select the correct statement (s)

- A. Radial function  $[R(r)]$  part of  $\Psi$  depends only on principal quantum number 'n'
- B. Angular function  $[y(0, \phi)]$  part of  $\Psi$  is independent of 'n'.

C.  $\Psi^2$  gives the probability density of finding electron at a particular point in space.

D. R.D.F ( $4\pi r^2 R^2$ ) gives the probability of the electron being present at a distance  $r$  from the nucleus.

**Answer: b c d**

 [Watch Video Solution](#)

**43. Select correct statement(s).**

A. In Bohr model it is possible to determine both position and momentum of electron simultaneously.

B. Energy of electron in second excited state of  $He^+$  is  $-13.6eV$

C. Angular momentum of electron moving in third orbit of H-atom is 3

D. There are 3 radial nodes in 5p orbital.

**Answer: c d**



Watch Video Solution

44. The wave function for 2s orbital is given as:

$$\Psi = \left( \frac{1}{\sqrt{2}} \right) \left( \frac{1}{\alpha_0} \right)^{3/2} \left( 2 - \frac{r}{\alpha_0} \right) \cdot e^{-r/2\alpha_0}$$

Where  $\alpha_0$  = First Bohr's radius in H-atom = 0.529 Å Read the given statement and pick out the correct statement(s).

- A. The number of radial nodes is equal to three.
- B. The probability density is independent of direction.
- C. The probability density of finding electron at nucleus is non-zero.
- D. The radial node occur at a distance  $2\alpha_0$  from nucleus.

Answer: b c d



Watch Video Solution

45. A hydrogen like atom in ground state absorbs  $n$  photon having the same energy and its emits exactly  $n'$  photon when electrons transition takes place. Then the energy of the absorbed photon may be

- A. 91.8 eV
- B. 40.8 eV
- C. 48.4 eV
- D. 54.4 eV

Answer: a b



Watch Video Solution

46. Choose the correct statement among the following

- A. Radial distribution function  $(\Psi^2 \cdot 4\pi r^2 dr)$  give probability at a particular distance along one chosen direction.



B.  $\Psi^2(r)$  give probability density at a particular distance over a spherical surface.

C. For 's' orbitals  $\Psi(r)\Psi(\theta)\Psi(\phi) = \Psi(x, y, z)$  is independent of  $\theta$  and  $\phi$ .

D.  $2p'$  orbital with quantum numbers,  $n = 2, l = 1, m = 0$ , also shows angular dependence.

**Answer: c d**

 [Watch Video Solution](#)

**47.** Correct statement (s) regarding  $3p_y$  orbital *is / are* :

A. Angular part of wave function is independent of angles ( $\theta$  and  $\phi$ ).

B. No. of maximum when a curve is plotted between

$4\pi r^2(r)$  vs  $r$  are '2'.

C.  $xz'$  plane acts as nodal plane.

D. Magnetic quantum number must be '-1'.

Answer: b c

 [Watch Video Solution](#)

48. Choose the incorrect statement (s) :

A. Increasing order of wavelength is :

Microwaves > Radio waves > IR waves > Visible waves > UV waves

B. The order of Bohr radius is ( $r_n$  : where n is orbit number for a given atom)

$$r_1 < r_2 < r_3 < r_4$$

C. The order of total energy is ( $E_n$  : where n is orbit number for a given atom)

$$E_1 > E_2 > E_3 > E_4$$

D. The order of velocity of electron in  $H$ ,  $He^+$ ,  $Li^+$ ,  $Be^{3+}$  species in second Bohr orbit is

$$Be^{3+} > Li^{+2} > He^+ > H$$

**Answer: a c**

 [Watch Video Solution](#)

49. Which of the following *is/are* correct statement (s).

A. The difference in angular momentum associated with the electron

present in consecutive orbits of H-atom is  $(n - 1) \frac{h}{2\pi}$ .

B. Energy difference between energy levels will be changed if PE at

infinity assigned value other than zero.

C. Frequency of spectral line in a H-atom is in the order of

$$(2 \rightarrow 1) < (3 \rightarrow 1) < (4 \rightarrow 1).$$

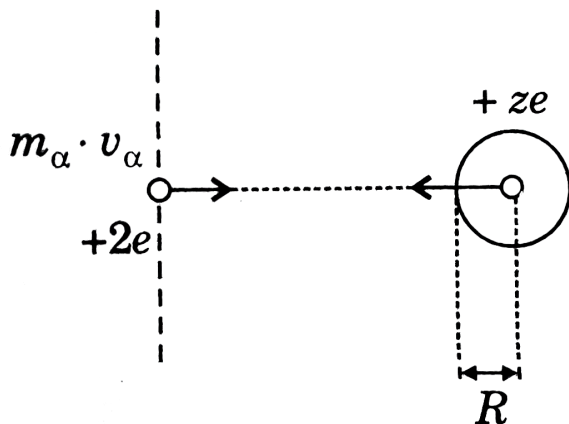
D. On moving away from the nucleus, kinetic energy of electron decreases.

Answer: c d

 Watch Video Solution

## Comprehension Type

1. Read the following passage carefully and answer the questions



The approximate size of the nucleus can be calculated by using energy conservation theorem in Rutherford's  $\alpha$  – scattering experiment. If an

$\alpha$  – particle is projected from infinity with speed  $v$ , towards the nucleus having  $z$  protons then the *alpha* – particle which is reflected back or which is deflected by  $180^\circ$  must have approach closest to the nucleus. It can be approximated that  $\alpha$  – particles collides with the nucleus and gets back. Now if we apply the energy conservation at initial and collision point then:

$$(\text{Total Energy})_{\text{initial}} = (\text{Total Enregy})_{\text{final}}$$

$$(KE)_i + (PE)_i = (KE)_f + (PE)_f$$

$(PE)_i = 0$ , since  $PE$  of two charge system separated by infinite distance is zero, finally the particle stops and then starts coming back.

$$\frac{1}{2}m_\alpha v_\alpha^2 + 0 = 0 + \frac{kq_1q_2}{R}$$

$$\Rightarrow \frac{1}{2}m_\alpha v_\alpha^2 = k \frac{2e \times ze}{R} \Rightarrow R = \frac{4kze^2}{m_\alpha v_\alpha^2}$$

Thus the radius of nucleus can be calculated using above equation. The nucleus is so small a particle that we can't define a sharp boundary for it .

Experiments show that the average radius  $R$  fo a nucleus may be written as

$$R = R_0(A)^{1/3}$$

where  $R_0 = 1.2 \times 10^{-15} m$

A= atomic mass number

$R = \text{radius of nucleus}$

If the diameter of two different nuclei are in the ratio 1:2 then their mass number are in the ratio:

A. 0.0430555555555556

B. 0.334027777777778

C. 0.0472222222222222

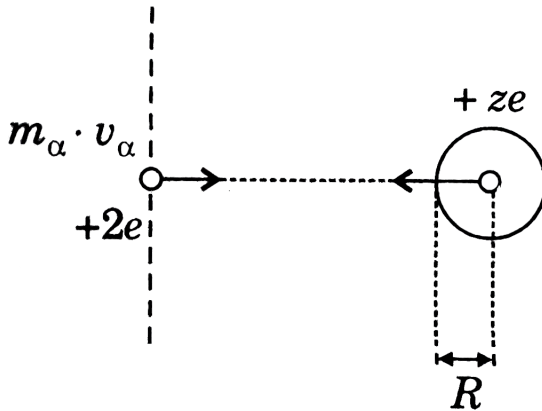
D. 0.0444444444444444

**Answer: c**



**Watch Video Solution**

2. Read the following passage carefully and answer the questions



The approximate size of the nucleus can be calculated by using energy conservation theorem in Rutherford's  $\alpha$  – scattering experiment. If an  $\alpha$  – particle is projected from infinity with speed  $v$ , towards the nucleus having  $z$  protons then the  $\alpha$  – particle which is reflected back or which is deflected by  $180^{\circ}$  must have approach closest to the nucleus. It can be approximated that  $\alpha$  – particles collides with the nucleus and gets back. Now if we apply the energy conservation at initial and collision point then:

$$(\text{Total Energy})_{\text{initial}} = (\text{Total Enregy})_{\text{final}}$$

$$(KE)_i + (PE)_i = (KE)_f + (PE)_f$$

$(PE)_i = 0$ , since  $PE$  of two charge system separated by infinite distance is zero, finally the particle stops and then starts coming back.

$$\frac{1}{2}m_{\alpha}v_{\alpha}^2 + 0 = 0 + \frac{kq_1q_2}{R}$$

$$\Rightarrow \frac{1}{2}m_{\alpha}v_{\alpha}^2 = k\frac{2e \times ze}{R} \Rightarrow R = \frac{4kze^2}{m_{\alpha}v_{\alpha}^2}$$

Thus the radius of nucleus can be calculated using above equation. The nucleus is so small a particle that we can't define a sharp boundary for it .

Experiments show that the average radius R fo a nucleus may be written as

$$R = R_0(A)^{1/3}$$

$$\text{where } R_0 = 1.2 \times 10^{-15}m$$

A= atomic mass number

R=radius of nucleus

If  $\alpha$  – particle with speed  $v_0$  is projected from infinity and it approaches upto  $r_0$  distance from the nuclei. Then the speed of  $\alpha$  – particle which approaches  $2r_0$  distance from the nucleus is

A.  $\sqrt{2}v_0$

B.  $\frac{v_0}{\sqrt{2}}$

C.  $2v_0$

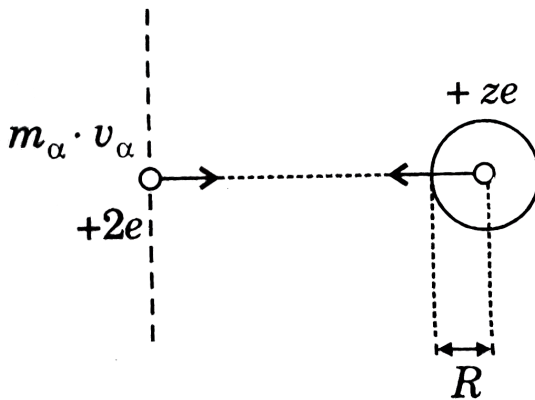
D.  $\frac{v_0}{2}$



Answer: b

 Watch Video Solution

3. Read the following passage carefully and answer the questions



The approximate size of the nucleus can be calculated by using energy conservation theorem in Rutherford's  $\alpha$  – scattering experiment. If an  $\alpha$  – particle is projected from infinity with speed  $v$ , towards the nucleus having  $z$  protons then the  $\alpha$  – particle which is reflected back or which is deflected by  $180^\circ$  must have approach closest to the nucleus. It can be approximated that  $\alpha$  – particles collides with the nucleus and gets back. Now if we apply the energy conservation at initial and collision point then:

$$(\text{Total Energy})_{\text{initial}} = (\text{Total Energy})_{\text{final}}$$

$$(KE)_i + (PE)_i = (KE)_f + (PE)_f$$

$(PE)_i = 0$ , since  $PE$  of two charge system separated by infinite distance is zero, finally the particle stops and then starts coming back.

$$\frac{1}{2}m_{\alpha}v_{\alpha}^2 + 0 = 0 + \frac{kq_1q_2}{R}$$

$$\Rightarrow \frac{1}{2}m_{\alpha}v_{\alpha}^2 = k \frac{2e \times ze}{R} \Rightarrow R = \frac{4kze^2}{m_{\alpha}v_{\alpha}^2}$$

Thus the radius of nucleus can be calculated using above equation. The nucleus is so small a particle that we can't define a sharp boundary for it .

Experiments show that the average radius  $R$  fo a nucleus may be written as

$$R = R_0(A)^{1/3}$$

$$\text{where } R_0 = 1.2 \times 10^{-15} m$$

$A$ = atomic mass number

$R$ =radius of nucleus

Radius of a particular nucleus is calculated by the projection of  $\alpha$  – particle from infinity at a particular speed. Let this radius be the true radius. If the radius calculation for the same nucleus is made by ,  $\alpha$  – particle with half of the earlier speed then the percentage error involved in the radius calculation is :

A. 0.75

B. 1

C. 3

D. 4

**Answer: c**

 [Watch Video Solution](#)

4. One of the major requirement in atomic structure is determination of location of electron inside an atom. The wave mechanical model establishes this in accordance with Heisenberg's uncertainty principle through the concept of orbitals. The orbitals are defined as that '3D' space in which probability of finding electron is maximum and are represented by wave functions  $\Psi_{n,l,m}$  where  $n, l$  and  $m$  are quantum number. The variation of  $\Psi$  is analysed in terms of polar coordinates and hence  $\Psi = f(r, \theta, \phi)$  where 'r' represents radius vector and  $\theta$  and  $\phi$  represents angle ( $\angle$ ) which the radius vector with x-axis respectively. The

expressions of  $\Psi_{r,0,\phi}$  are often given in terms of  $\sigma$  instead of  $r$  where

$$\sigma = \frac{2Zr}{n\alpha_0} \text{ and } Z = \text{atomic number and } n = \text{shell number.}$$

Which of the following wave function cannot represent an atomic orbital of H-atom?

$$\text{A. } \Psi = \frac{1}{18\sqrt{8\pi}} \left(\frac{1}{\alpha_0}\right)^{3/2} \cdot \sigma^2 \cdot e^{-\sigma/2} \cdot \sin^2 \theta \cdot \cos 2\phi$$

$$\text{B. } \Psi = \frac{1}{\sqrt{2\pi}} \cdot \left(\frac{1}{\alpha_0}\right)^{3/2} \cdot \sigma \cdot e^{-\sigma/2} \cdot \sin \theta \cdot \sin \phi$$

$$\text{C. } \Psi = \frac{1}{18} \sqrt{\frac{5}{\pi}} \cdot \left(\frac{1}{\alpha_0}\right)^{3/2} (6 - 6\sigma + \sigma^2) \cdot e^{-\sigma/2} \cdot \sin \theta \cdot \cos \phi$$

$$\text{D. } \Psi = \frac{1}{\sqrt{32\pi}} \cdot \left(\frac{1}{\alpha_0}\right)^{3/2} (2 - \sigma) \cdot e^{-\sigma/2}$$

**Answer: c**



**Watch Video Solution**

5. One of the major requirement in atomic structure is determination of location of electron inside an atom. The wave mechanical model establishes this in accordance with Heisenberg's uncertainty principle

through the concept of orbitals. The orbitals are defined as that '3D' space in which probability of finding electron is maximum and are represented by wave functions  $\Psi_{n,l,m}$  where n, l and m are quantum number. The variation of  $\Psi$  is analysed in terms of polar coordinates and hence  $\Psi = f(r, \theta, \phi)$  where 'r' represents radius vector and  $\theta$  and  $\phi$  represents angle ( $\angle$ ) which the radius vector with x-axis respectively. The expressions of  $\Psi_{r,0,\phi}$  are often given in terms of  $\sigma$  instead of r where  $\sigma = \frac{2Zr}{n\alpha_0}$  and Z = atomic number and n = shell number.

Which of the following statement is incorrect with respect to  $\Psi_{(r)}$  vs. r graph for H-atom?

- A. For a 3d orbital, the graph will not intersect the x-axis at any finite, non-zero value.
- B. For a 4s orbital, the graph will intersect at exactly three distinct, non-zero finite points.
- C. For 1s orbital the sign of the  $\Psi_{(r)}$  will not change after at any radial distance.

D. For 3p orbital , the graph will intersect x-axis at two non-zero distinct points.

**Answer: d**

 [View Text Solution](#)

6. One of the major requirement in atomic structure is determination of location of electron inside an atom. The wave mechanical model establishes this in accordance with Heisenberg's uncertainty principle through the concept of orbitals. The orbitals are defined as that '3D' space in which probability of finding electron is maximum and are represented by wave functions  $\Psi_{n,l,m}$  where n, l and m are quantum number. The variation of  $\Psi$  is analysed in terms of polar coordinates and hence  $\Psi = f(r, \theta, \phi)$  where 'r' represents radius vector and  $\theta$  and  $\phi$  represents angle ( $\angle$ ) which the radius vector with x-axis respectively. The expressions of  $\Psi_{r,0,\phi}$  are often given in terms of  $\sigma$  instead of r where  $\sigma = \frac{2Zr}{n\alpha_0}$  and Z = atomic number and n = shell number.

If an orbital is represented as:

$$\Psi_{r,0,\phi} = \frac{2}{3} \left( \frac{1}{3\alpha_0} \right)^{3/2} \cdot (\sigma - 1)(\sigma^2 - 8\sigma + 12) \cdot \sigma^{-\sigma/2} \cdot \cos 0$$

belong to which orbital?

A.  $6d_{x^2 - y^2}$

B.  $5p_z$

C.  $5p_y$

D.  $6d_{z^2}$

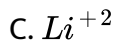
**Answer: b**



**Watch Video Solution**

7. A hydrogen like species is in a spherical symmetrical orbital  $S_1$  having 3 radial nodes. It gets de-excited to another level  $S_2$  having no radial node. Energy of  $S_2$  orbital is 2.25 times energy of 1st Bohr orbit of hydrogen atom.

Identify the species involved



**Answer: c**

 [Watch Video Solution](#)

8. A hydrogen like species is in a spherical symmetrical orbital  $S_1$  having 3 radial nodes. It gets de-excited to another level  $S_2$  having no radial node. Energy of  $S_2$  orbital is 2.25 times energy of 1st Bohr orbit of hydrogen atom.

What is the orbital angular momentum quantum number of  $S_2$ ?

A. 1

B. 0

C. 2



D.  $\frac{h}{2\pi}$

**Answer: a**



**Watch Video Solution**

9. A hydrogen like species is in a spherical symmetrical orbital  $S_1$  having 3 radial nodes. It gets de-excited to another level  $S_2$  having no radial node. Energy of  $S_2$  orbital is 2.25 times energy of 1st Bohr orbit of hydrogen atom. What is the combined total number of nodes (radial + angular) in  $S_1$  and  $S_2$ ?

A. 4

B. 3

C. 5

D. 6

**Answer: a**



**Watch Video Solution**

10. Let us assume a different atomic model in which electron revolves around the nucleus (proton) at a separation  $r$  under the action of force which is different from electro-static force of attraction. The potential energy between an electron and the proton due to this force is given by

$$U = -\frac{k}{r^4} \text{ where } k \text{ is a constant.}$$

Find the radius of  $n$  th Bohr's orbit.

A.  $r = \frac{\pi}{nh} \sqrt{km}$

B.  $r = \frac{2\pi}{nh} \sqrt{km}$

C.  $r = \frac{4\pi}{nh} \sqrt{km}$

D.  $r = \frac{8\pi}{nh} \sqrt{km}$

**Answer: c**



**Watch Video Solution**

11. Let us assume a different atomic model in which electron revolves around the nucleus (proton) at a separation  $r$  under the action of force which is different from electro-static force of attraction. The potential energy between an electron and the proton due to this force is given by

$$U = - \frac{k}{r^4} \text{ where } k \text{ is a constant.}$$

Find the radius of  $n$  th Bohr's orbit.

A.  $u = \frac{nh}{8\pi^2 m \sqrt{km}}$

B.  $u = \frac{n^2 h}{8\pi^2 m \sqrt{km}}$

C.  $u = \frac{nh^2}{4\pi^2 m \sqrt{km}}$

D.  $u = \frac{n^2 h^2}{8\pi^2 m \sqrt{km}}$

**Answer: d**



**Watch Video Solution**

12. Let us assume a different atomic model in which electron revolves around the nucleus (proton) at a separation  $r$  under the action of force

which is different from electro-static force of attraction. The potential energy between an electron and the proton due to this force is given by

$$U = - \frac{k}{r^4} \text{ where } k \text{ is a constant.}$$

Find the radius of n th Bohr's orbit.

A.  $\frac{-n^4 h^4}{128\pi^4 m^2 k}$

B.  $\frac{n^4 h^4}{128\pi^4 m^2 k}$

C.  $\frac{n^4 h^4}{256k\pi^4 m^2}$

D.  $\frac{-n^4 h^4}{256\pi^4 m^2}$

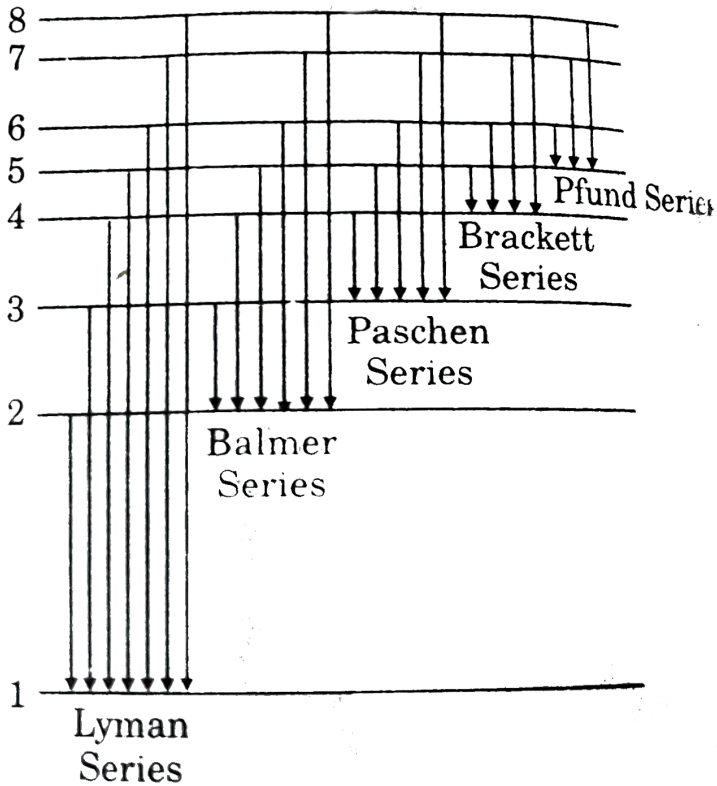
**Answer: c**



**Watch Video Solution**

**13.** the only electron in the hydrogen atom resides under ordinary conditions in the first orbit. When energy is supplied the electron moves to higher energy orbit depending on the amount of energy absorbed. It emits energy. Lyman series is formed when the electron returns to the lowest orbit while Balmer series is formed when the electron returns to

second. Similarly, Paschen, Brackett and Pfund series are formed when electron returns to the third, fourth and fifth orbits from higher energy orbits respectively (as shown in figure).



Maximum number of different lines produced when electron jump from  $n$ th level to ground level is equal to

$$\frac{n(n-1)}{2}$$

For example in the case of  $n = 4$ , number of lines produced is 6. ( $4 \rightarrow 3, 4 \rightarrow 2, 4 \rightarrow 1, 3 \rightarrow 2, 3 \rightarrow 1, 2 \rightarrow 1$ ). When an electron

returns from  $n_2$  to  $n_1$  state, the number of different

lines in the spectrum will be equal to  $\frac{(n_2 - n_1)(n_2 - n_1 + 1)}{2}$

If the electron comes back from energy level having energy  $E_2$  to energy level having energy  $E_1$ , then the difference may be expressed in terms of energy of photon as:

$$E_2 - E_1 = \Delta E, \lambda = \frac{hc}{\Delta E}, \Delta E = h\nu (\nu - \text{frequency})$$

Since  $h$  and  $c$  are constants  $\Delta E$  corresponds to definite energy: thus each transition from one energy level to another will produce a light of definite wavelength. This is actually observed as a line in the spectrum of hydrogen atom.

Wave number of line is given by the formula:

$$\bar{\nu} = RZ^2 \left( \frac{1}{n_1^2} - \frac{1}{n_2^2} \right)$$

where  $R$  is a Rydberg constant ( $R = 1.1 \times 10^7 m^{-1}$ ).

(i) First line of a series : It is called line of longest wavelength of line of smallest energy'.

(ii) Series limit or last line of a series : It is the line of shortest wavelength or line of highest energy.

Last line of breakett series for H-atom has wavelength  $\lambda_1 \text{\AA}$  and 2nd line of Lyman series has wavelength  $\lambda_2 \text{\AA}$  then:

A.  $\frac{128}{\lambda_1} = \frac{9}{\lambda_2}$

B.  $\frac{16}{\lambda_1} = \frac{9}{\lambda_2}$

C.  $\frac{4}{\lambda_1} = \frac{1}{\lambda_2}$

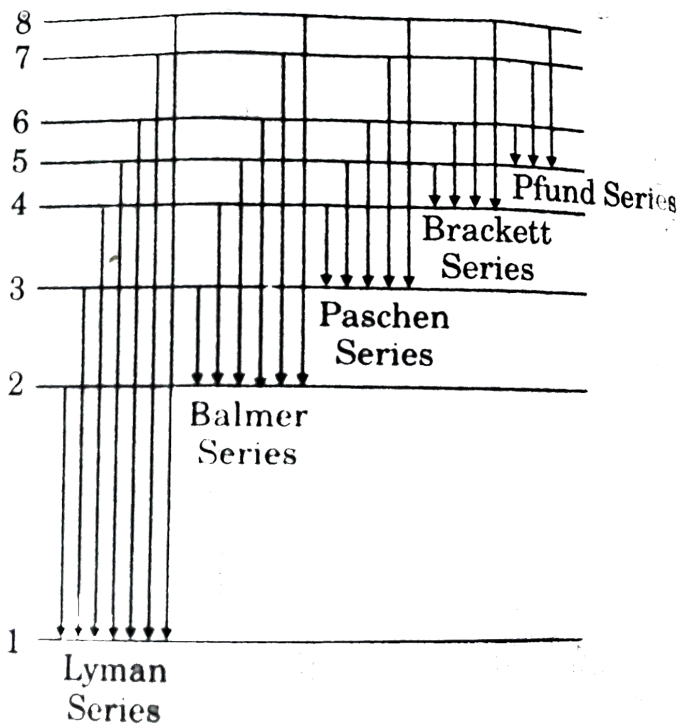
D.  $\frac{128}{\lambda_1} = \frac{1}{\lambda_2}$

**Answer: a**



**Watch Video Solution**

**14.** the only electron in the hydrogen atom resides under ordinary conditions in the first orbit. When energy is supplied the electron moves to higher energy orbit depending on the amount of energy absorbed. It emits energy. Lyman series is formed when the electron returns to the lowest orbit while Balmer series is formed when the electron returns to second. Similarly, Paschen, Breakett and Pfund series are formed when electron returns to the third, fourth and fifth orbits from higher energy orbits respectively (as shown in figure).



Maximum number of different lines produced when electron jump from  $n$ th level to ground level is equal to

$$\frac{n(n-1)}{2}$$

For example in the case of  $n = 4$ , number of lines produced is 6. ( $4 \rightarrow 3, 4 \rightarrow 2, 4 \rightarrow 1, 3 \rightarrow 2, 3 \rightarrow 1, 2 \rightarrow 1$ ). When an electron returns from  $n_2$  to  $n_1$  state, the number of different

lines in the spectrum will be equal to  $\frac{(n_2 - n_1)(n_2 - n_1 + 1)}{2}$

If the electron comes back from energy level having energy  $E_2$  to energy level having energy  $E_1$ , then the difference may be expressed in terms of



energy of photon as:

$$E_2 - E_1 = \Delta E, \lambda = \frac{hc}{\Delta E}, \Delta E = h\nu(\nu - \text{frequency})$$

Since  $h$  and  $c$  are constants  $\Delta E$  corresponds to definite energy: thus each transition from one energy level to another will produce a light of definite wavelength. This is actually observed as a line in the spectrum of hydrogen atom.

Wave number of line is given by the formula:

$$\bar{\nu} = RZ^2 \left( \frac{1}{n_1^2} - \frac{1}{n_2^2} \right)$$

where  $R$  is a Rydberg constant ( $R = 1.1 \times 10^7 m^{-1}$ ).

(i) First line of a series : It is called line of longest wavelength of line of smallest energy'.

(ii) Series limit or last line of a series : It is the line of shortest wavelength or line of highest energy.

Consider the following statements

(i) Spectral lines of  $He^+$  ion belonging to Balmer series are not in visible range.

(ii) In the Balmer series of H-atom maximum lines are in ultraviolet region.

(iii) 2nd line of Lyman series of  $He^+$  ion has energy  $48.35eV$

The above statement (i), (ii), (iii) respectively are

( $T = True, F = False$ ):

A. TFF

B. FTT

C. TFT

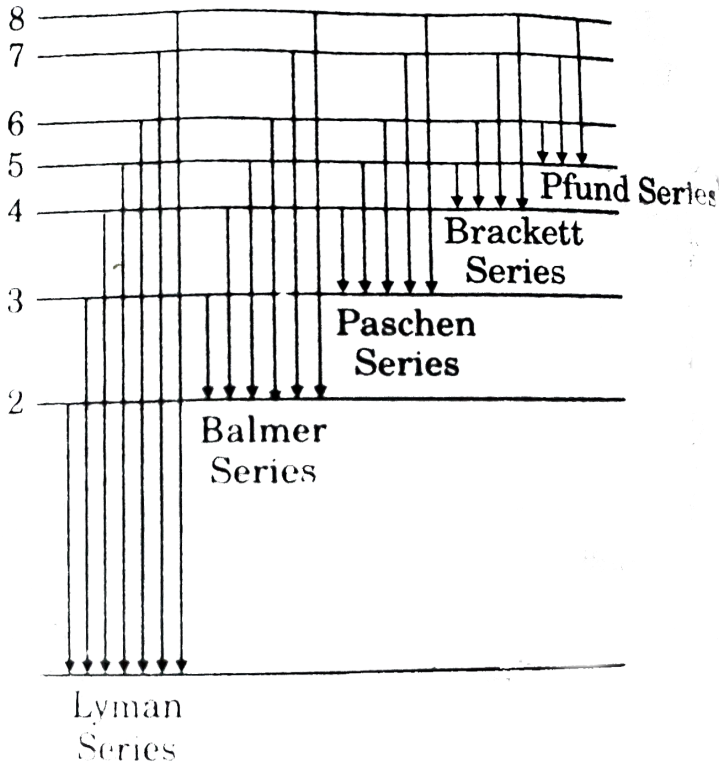
D. TTT

**Answer: d**

 [Watch Video Solution](#)

15. the only electron in the hydrogen atom resides under ordinary conditions in the first orbit. When energy is supplied the electron moves to higher energy orbit depending on the amount of energy absorbed. It emits energy. Lyman series is formed when the electron returns to the lowest orbit while Balmer series is formed when the electron returns to second. Similarly, Paschen, Breakett and Pfund series are formed when electron returns to the third, fourth and fifth orbits from higher energy

orbits respectively (as shown in figure).



Maximum number of different lines produced when electron jump from  $n$ th level to ground level is equal to

$$\frac{n(n-1)}{2}$$

For example in the case of  $n = 4$ , number of lines produced is 6. ( $4 \rightarrow 3, 4 \rightarrow 2, 4 \rightarrow 1, 3 \rightarrow 2, 3 \rightarrow 1, 2 \rightarrow 1$ ). When an electron returns from  $n_2$  to  $n_1$  state, the number of different

lines in the spectrum will be equal to  $\frac{(n_2 - n_1)(n_2 - n_1 + 1)}{2}$

If the electron comes back from energy level having energy  $E_2$  to energy level having energy  $E_1$ , then the difference may be expressed in terms of energy of photon as:

$$E_2 - E_1 = \Delta E, \lambda = \frac{hc}{\Delta E}, \Delta E = h\nu (\nu - \text{frequency})$$

Since  $h$  and  $c$  are constants  $\Delta E$  corresponds to definite energy: thus each transition from one energy level to another will produce a light of definite wavelength. This is actually observed as a line in the spectrum of hydrogen atom.

Wave number of line is given by the formula:

$$\bar{\nu} = RZ^2 \left( \frac{1}{n_1^2} - \frac{1}{n_2^2} \right)$$

where  $R$  is a Rydberg constant ( $R = 1.1 \times 10^7 m^{-1}$ ).

(i) First line of a series : It is called line of longest wavelength of line of smallest energy'.

(ii) Series limit or last line of a series : It is the line of shortest wavelength or line of highest energy.

wave number of the first line of Paschen series in  $Be^{3+}$  ion is :

A.  $\frac{7R}{16}$

B.  $\frac{7R}{144}$

C.  $\frac{7R}{9}$

D.  $\frac{R}{144}$

**Answer: c**



**Watch Video Solution**

16. de Broglie proposed dual nature for electron by putting his famous equation  $\lambda = \frac{h}{mv}$ . Later on, Heisenberg proposed uncertainty principle as  $\delta p \Delta x \geq \frac{h}{4\pi}$ . On the contrary,

Particle nature of electron was established on the basis of photoelectric effect. When a photon strikes the metal surface it gives up its energy to the electron. Part of this energy (say  $W$ ) is used by the electrons to escape from the metal and the remaining energy imparts kinetic energy ( $1/2mv^2$ ) to the ejected photoelectron. The potential applied on the surface to reduce the velocity of photoelectron to zero is known as stopping potential .

When a beam of photons of a particular energy was incident on a surface of a particular pure metal having work function  $\phi = (40 \text{ eV})$ , some emitted

photoelectrons had stopping potential equal to 22 V. some had 12V and rest had lower values. Calculate the wavelength of incident photons assuming that at least one photoelectron is ejected with maximum possible kinetic energy :

A. 310Å

B. 298Å

C. 238Å

D. 200Å

**Answer: d**



[Watch Video Solution](#)

17. de Broglie proposed dual nature for electron by putting his famous equation  $\lambda = \frac{h}{mv}$ . Later on, Heisenberg proposed uncertainty principle as  $\delta p \Delta x \geq \frac{h}{4\pi}$ . On the contrary,

Particle nature of electron was established on the basis of photoelectric effect. When a photon strikes the metal surface it gives up its energy to

the electron. Part of this energy (say  $W$ ) is used by the electrons to escape from the metal and the remaining energy imparts kinetic energy ( $1/2mv^2$ ) to the ejected photoelectron. The potential applied on the surface to reduce the velocity of photoelectron to zero is known as stopping potential .

The circumference of third orbit of a single electron species is 3 nm. What may be the approximate wavelength of the photon required to just ionize electron from this orbit?

- A. 91.1 nm
- B. 364.7 nm
- C. 821 nm
- D. 205 nm

**Answer: c**



**Watch Video Solution**

18. Excited atoms emit radiations consisting of only certain discrete frequencies or wavelengths. In spectroscopy it is often more convenient to use frequencies and wave numbers are proportional to energy and spectroscopy involves transitions between different energy levels. The line spectrum shown by a single electron excited atom (a finger print of an atom) can be given as

$$\frac{1}{\lambda} = \bar{\nu} R_H \cdot Z^2 \left[ \frac{1}{n_1^2} - \frac{1}{n_2^2} \right]$$

where  $Z$  is atomic number of single electron atom and  $n_1, n_2$  are integers and if  $n_2 > n_1$ , then emission spectrum is noticed and if  $n_2 < n_1$ , then absorption spectrum is noticed.

Every line in spectrum can be represented as a difference of two terms

$$\frac{R_H Z^2}{n_1^2} \text{ and } \frac{R_H Z^2}{n_2^2}.$$

The ratio of wavelength for II line of Balmer series and I line of Lyman series for H-like species is :

A.  $\frac{1}{4}$

B. 2

C. 3



Answer: d

 [Watch Video Solution](#)

19. Excited atoms emit radiations consisting of only certain discrete frequencies or wavelengths. In spectroscopy it is often more convenient to use frequencies and wave numbers are proportional to energy and spectroscopy involves transitions between different energy levels. The line spectrum shown by a single electron excited atom (a finger print of an atom) can be given as

$$\frac{1}{\lambda} = \bar{\nu} R_H \cdot Z^2 \left[ \frac{1}{n_1^2} - \frac{1}{n_2^2} \right]$$

where  $Z$  is atomic number of single electron atom and  $n_1, n_2$  are integers and if  $n_2 > n_1$ , then emission spectrum is noticed and if  $n_2 < n_1$ , then absorption spectrum is noticed.

Every line in spectrum can be represented as a difference of two terms

$$\frac{R_H Z^2}{n_1^2} \text{ and } \frac{R_H Z^2}{n_2^2}.$$

H-atoms in ground state (13.6 eV) are excited by monochromatic radiations of photon of energy 12.09 eV. The number of different spectral lines emitted in H-atoms will be:

A. 1

B. 2

C. 3

D. 6

**Answer: c**



[Watch Video Solution](#)

**20.** In an atom when an electron jumps from higher energy level to lower energy level it emits energy in form of electromagnetic radiations. When these electromagnetic radiations are passed through a prism and received on a photographic film some lines are observed on that film and those lines are called spectral lines.

For hydrogen like species when jump takes from any excited state to

ground state ( $n = 1$ ), line produced in that case is called a Lyman series line.

If transition occurs from 3rd or above level to second level then corresponding lines produced are called Balmer lines. Similarly, for next level it is called Paschen series line.

The wavelength of photon corresponding to second least energy of Lyman series in H-atom is :

A. 102 nm

B. 121 nm

C. 91 nm

D. 486 nm

**Answer: a**



[Watch Video Solution](#)

**21.** In an atom when an electron jumps from higher energy level to lower energy level it emits energy in form of electromagnetic radiations. When

these electromagnetic radiations are passed through a prism and received on a photographic film some lines are observed on that film and those lines are called spectral lines.

For hydrogen like species when jump takes from any excited state to ground state ( $n = 1$ ), line produced in that case is called a Lyman series line.

If transition occurs from 3rd or above level to second level then corresponding lines produced are called Balmer lines. Similarly, for next level it is called Paschen series line.

If there are 3 atoms of a hydrogen like species one in 2nd one in 3rd and one in 4th excited state, then how many maximum total different Balmer and Paschen lines can be produced ?

- A. 2
- B. 3
- C. 4
- D. 5

**Answer: d**



Watch Video Solution

22. From hydrogen gas discharge tube, light is emitted. Emitted light is used to emit electron from sodium metal of work function  $\phi = 1.82\text{eV}$ . If the fastest photoelectron has KE of 0.73 eV, the wavelength of incident radiation on the sodium metal is :

A.  $5627.63\text{\AA}$

B.  $4862.74\text{\AA}$

C.  $3384\text{\AA}$

D.  $9872\text{\AA}$

Answer: b



Watch Video Solution

23. From hydrogen gas discharge tube, light is emitted. Emitted light is used to emit electron from sodium metal of work function  $\phi = 1.82\text{eV}$

the transition in hydrogen atom takes place from:

A.  $n_1 = 4$  to  $n_2 = 1$

B.  $n_1 = 4$  to  $n_2 = 3$

C.  $n_1 = 3$  to  $n_2 = 1$

D.  $n_1 = 4$  to  $n_2 = 2$

**Answer: d**



**Watch Video Solution**

**24.** In a H-like species there are two energy levels A and B above the ground state having principal quantum numbers of  $n_1$  and  $n_2$  respectively. A sample of this H-like species has all atoms / ions in excited levels A or B only and none in any other energy level. Energy of level B is greater than that of level A and a total of 15 different lines are emitted from this sample on returning to ground state out of which 6 lines are emitted due to electronic transitions between the level  $n_1$  and  $n_2$  only. Also energy

difference between levels  $n_2$  and  $n_1$ ,  $E_{n_2} - E_{n_1} = 4.53eV$

The correct option is :

A.  $n_2 = 2, n_1 = 5$

B.  $n_2 = 6, n_1 = 3$

C.  $n_2 = 5, n_1 = 2$

D.  $n_2 = 3, n_1 = 6$

**Answer: b**



**Watch Video Solution**

**25.** In a H-like species there are two energy levels A and B above the ground state having principal quantum numbers of  $n_1$  and  $n_2$  respectively. A sample of this H-like species has all atoms / ions in excited levels A or B only and none in any other energy level. Energy of level B is greater than that of level A and a total of 15 different lines are emitted from this sample on returning to ground state out of which 6 lines are emitted due to electronic transitions between the level  $n_1$  and  $n_2$  only. Also energy

difference between levels  $n_2$  and  $n_1$ ,  $E_{n_2} - E_{n_1} = 4.53 eV$

Calculate minimum wavelength of the above transition:

A.  $\frac{4}{3R_H}$

B.  $\frac{9}{8R_H}$

C.  $\frac{900}{11R_H}$

D.  $\frac{36}{35R_H}$

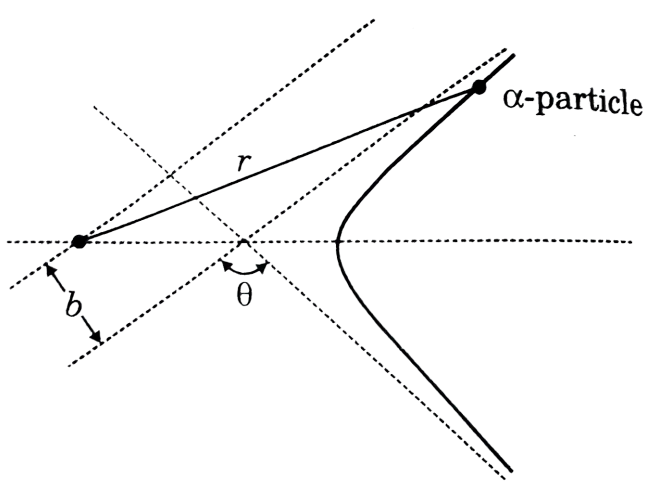
**Answer: d**



**Watch Video Solution**

**26.** The following text gives a qualitative idea about Rutherford's  $\alpha$  – particle scattering experiment.





Scattering of  $\alpha$ -particles

Applying some trigonometry and calculus, Rutherford got the following equation:

$$\cot\left(\frac{\theta}{2}\right) = \frac{K \times (KE)}{Ze^2} \times b$$

$$\text{where, } K = \text{constant} = \left(\frac{1}{9 \times 10}\right) \frac{c^2}{N - m^2}$$

KE = initial kinetic energy of  $\alpha$  – particle,

$$e = 1.6 \times 10^{-19} C$$

Identify the incorrect statement.

A. Scattering angle increases as impact parameter increases.

B. Scattering angle decreases as impact parameter increases.

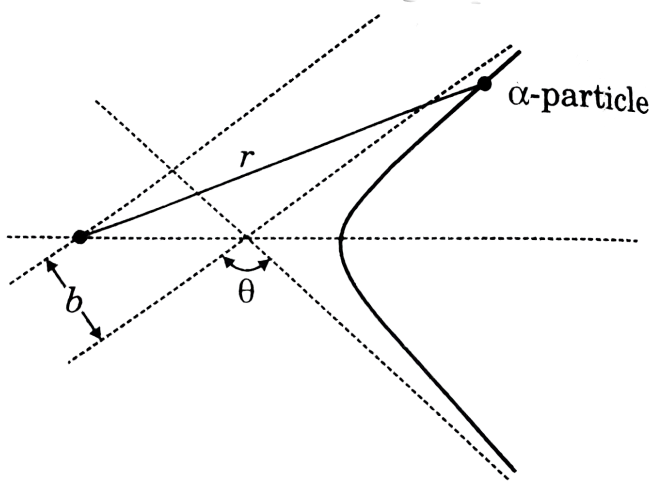
C. As the initial kinetic energy of  $\alpha$  – particle increases, scattering angle decreases.

D. Keeping all the other factor same , the scattering angle obtained from gold nucleus is larger than the scattering angle obtained from copper nucleus.

**Answer: a**

 [View Text Solution](#)

27. The following text gives a qualitative idea about Rutherford's  $\alpha$  – particle scattering experiment.



### Scattering of $\alpha$ -particles

Applying some trigonometry and calculus, Rutherford got the following equation:

$$\cot\left(\frac{\theta}{2}\right) = \frac{K \times (KE)}{Ze^2} \times b$$

$$\text{where, } K = \text{constant} = \left(\frac{1}{9 \times 10^9}\right) \frac{c^2}{N - m^2}$$

KE = initial kinetic energy of  $\alpha$  - particle,

$$e = 1.6 \times 10^{-19} C$$

In an experiment with gold nucleus (assume  $Z=80$ ) with impact parameter equal to  $10^{-4}m$  the scattering angle was found to be  $90^\circ$ , What should be the initial KE of  $\alpha$  - particle?

A.  $1.84 \times 10^{-12} J$

B.  $184 \times 10^{-12} J$

C.  $1.44 \times 10^{-12} J$

D.  $14.4 \times 10^{-12} J$

**Answer: a**

 **Watch Video Solution**

**28.** In three dimension wave function may be expressed in spherical coordinate system  $(r, \theta, \phi)$ ,  $r$  = distance of electron from the nucleus

$\theta$  = Angle from 'z' axis varying from 0 to  $\pi$

$\phi$  = Angle from 'x' axis ..... 0 to  $2\pi$  Itbr.  $\Psi$  may be represented as

$$\Psi(r, \theta, \phi) = R(r) \cdot A(\theta, \phi)$$

The  $R(r)$  is detemind by 'n' and 'l'. The  $A(\theta, \phi)$  is determined by 'l' and 'm'.

Which of the following is  $R(r)$  part of '3p' atomic orbital of hydrogen atom

[Given  $\alpha_0 = 0.529 \text{ \AA}$  ]?

A.  $\frac{2}{(a_0)^{3/2}} e^{-r/a_0}$

B.  $\frac{2}{27} \left( \frac{1}{3a_0} \right)^{3/2} \left( 27 - 18 \frac{r}{a_0} + 2 \frac{r^2}{a_0^2} \right) e^{-r/3a_0}$

$$C. \frac{2}{(2a_0)^{3/2}} \left( 2 - \frac{r}{a_0} \right) e^{-r/2a_0}$$

$$D. \frac{1}{81\sqrt{3}} \left( \frac{2}{a_0} \right)^{3/2} \left( 6 - \frac{r}{a_0} \right) e^{-r/3a_0}$$

Answer: d



View Text Solution

29. In three dimension wave function may be expressed in spherical coordinate system  $(r, \theta, \phi)$ ,  $r$  = distance of electron from the nucleus

$\theta$  = Angle from 'z' axis varying from 0 to  $\pi$

$\phi$  = Angle from 'x' axis ..... 0 to  $2\pi$  Itbr.  $\Psi$  may be represented as

$$\Psi(r, \theta, \phi) = R(r) \cdot A(\theta, \phi)$$

The  $R(r)$  is detemind by 'n' and 'l'. The  $A(\theta, \phi)$  is determined by 'l' and 'm'.

Angular part of 'H' atom wave equation  $A(\theta, \phi) = \frac{1}{\sqrt{4\pi}}$ . Hence , atomic

orbital is:

A. ' $d_{xz}$ ' orbital

B. ' $p_x$ ' orbital

C. ' $p_y$ ' orbital

D. s-orbital

**Answer: d**



**Watch Video Solution**

**30.** During one of its ambitious project "ISRP" gathered information through its stallites for a planet in another galaxy. As far as structure of atoms is considered , it is very similar to the structure of an atom in our planet except that

energy of an orbit in which electron resides is

$$(E_n) = \frac{45 \times Z}{n = 1} eV / \text{atom}.$$

Calculate wavelength (inÅ) of photon emitted when electron makes transition from 7th excited state to 1st excited state in H-atom of that planet:

A. 1240Å

B. 12400Å

C.  $310\text{\AA}$

D.  $3100\text{\AA}$

**Answer: a**



**Watch Video Solution**

31. During one of its ambitious project "ISRP" gathered information through its stallites for a planet in another galaxy. As far as structure of atoms is considered , it is very similar to the structure of an atom in our planet except that

energy of an orbit in which electron resides is

$$(E_n) = \frac{45 \times Z}{n = 1} eV / \text{atom}.$$

If photon of wavelength  $7\text{nm}$  strikes on an atom of hydrogen on that planet, then wavelength of ejected electron will be approximately:

A.  $0.1\text{\AA}$

B.  $1\text{\AA}$

C.  $5\text{\AA}$

D.  $11\text{\AA}$

**Answer: b**



**Watch Video Solution**

**32.** During one of its ambitious project "ISRP" gathered information through its stallites for a planet in another galaxy. As far as structure of atoms is considered , it is very similar to the structure of an atom in our planet except that

energy of an orbit in which electron resides is

$$(E_n) = \frac{45 \times Z}{n = 1} eV / \text{atom}.$$

If collection of H-atom and  $He^+$  ion makes transition from 2nd orbit and 5th orbit respectively, then total different spectral lines emitted will be :

A. 10

B. 11



C. 6

D. 9

**Answer: a**



**Watch Video Solution**

**33.** A H-like species  $Be^{3+}$  is in a spherically symmetric state  $S_1$  with two radial nodes. Upon absorbing light the ion undergoes transition to a state  $S_2$ . The state  $S_2$  has one radial node and its energy is equal to the ground state energy of the H-atom.

The state  $S_2$  is :

A. 2s

B. 2p

C. 3s

D. 4s

**Answer: c**



Watch Video Solution

34. A H-like species  $Be^{3+}$  is in a spherically symmetric state  $S_1$  with two radial nodes. Upon absorbing light the ion undergoes transition to a state  $S_2$ . The state  $S_2$  has one radial node and its energy is equal to the ground state energy of the H-atom.

Energy of state  $S_1$  in units of  $He^+$  ground state energy is :

A. 0.75

B. 1.33

C. 0.44

D. 2.25

Answer: c



Watch Video Solution

35. A H-like species  $Be^{3+}$  is in a spherically symmetric state  $S_1$  with two radial nodes. Upon absorbing light the ion undergoes transition to a state  $S_2$ . The state  $S_2$  has one radial node and its energy is equal to the ground state energy of the H-atom.

The orbital angular momentum of the state  $S_2$  is :

A.  $\sqrt{1.5h}$

B.  $\sqrt{2}h$

C. 0

D. h

**Answer: a**



[Watch Video Solution](#)

36. The French physicist Louis de Broglie in 1924 postulated that matter like radiation, should exhibit a dual behaviour. He proposed the following relationship between the wavelength  $\lambda$  of a material particle, its linear

momentum  $P$  and Planck constant  $h$ .

$$\lambda = \frac{h}{p} = \frac{h}{mv}$$

The de Broglie relation states that the wavelength of a particle should decrease as its velocity increases. It also implies that for a given velocity heavier particles should have shorter wavelength than lighter particles. These are called de Broglie waves. These waves differ from the electromagnetic waves as they:

- (i) have lower velocities
- (ii) have no electrical and magnetic fields and
- (iii) are not emitted by the particle under consideration.

The experimental confirmation of the de Broglie relation was obtained when Davisson and Germer in 1927, observed. As diffraction is a characteristic property of waves, hence the beam of electrons behave as a wave as proposed by de Broglie.

Werner Heisenberg considered the limits of how precisely we can measure properties of an electron or other microscopic particle like electron. He determined that there is a fundamental limit of how closely we can measure both position and momentum. The more accurately we can determine its position. The converse is also true. This is summed up

in what we now call the "Heisenberg uncertainty principle" : It is impossible to determine simultaneously and precisely both the momentum and position of a particle. The product of uncertainty in the position,  $\Delta x$  and the uncertainty in the momentum  $\Delta(mv)$  must be greater than or equal to  $\frac{h}{4\pi}$ , i. e. ,

$$\Delta x \Delta(mv) \geq \frac{h}{4\pi}$$

The correct order of wavelength of Hydrogen ( ${}_1H^1$ ) Deuterium ( ${}_1H^2$ ) and Tritium ( ${}_1H^3$ ) moving with same kinetic energy is :

A.  $\lambda_H > \lambda_D > \lambda_T$

B.  $\lambda_H = \lambda_D = \lambda_T$

C.  $\lambda_H < \lambda_D < \lambda_T$

D.  $\lambda_H < \lambda_D > \lambda_T$

**Answer: a**



**Watch Video Solution**

**37.** The French physicist Louis de Broglie in 1924 postulated that matter like radiation, should exhibit a dual behaviour. He proposed the following relationship between the wavelength  $\lambda$  of a material particle, its linear momentum  $P$  and Planck constant  $h$ .

$$\lambda = \frac{h}{p} = \frac{h}{mv}$$

The de Broglie relation states that the wavelength of a particle should decrease as its velocity increases. It also implies that for a given velocity heavier particles should have shorter wavelength than lighter particles. These waves are called de Broglie waves. These waves differ from the electromagnetic waves as they:

- (i) have lower velocities
- (ii) have no electrical and magnetic fields and
- (iii) are not emitted by the particle under consideration.

The experimental confirmation of the de Broglie relation was obtained when Davisson and Germer in 1927, observed. As diffraction is a characteristic property of waves, hence the beam of electrons behave as a wave as proposed by de Broglie.

Werner Heisenberg considered the limits of how precisely we can

measure properties of an electron or other microscopic particle like electron . He determined that there is a fundamental limit of how closely we can measure both position and momentum. The more accurately we can determine its position. The converse is also true. This is summed up in what we now call the "Heisenberg uncertainty principle" : It is impossible to determine simultaneously and precisely both the momentum and position of a particle. The product of uncertainty in the position,  $\Delta x$  and the uncertainty in the momentum  $\Delta(mv)$  must be greater than or equal to  $\frac{h}{4\pi}$ , *i. e.* ,

$$\Delta x \Delta(mv) \geq \frac{h}{4\pi}$$

The transition so that the de Broglie wavelength of electron becomes 3 times of its initial value in  $He^+$  ion will be :

A.  $2 \rightarrow 5$

B.  $3 \rightarrow 2$

C.  $2 \rightarrow 6$

D.  $1 \rightarrow 2$

**Answer: c**

**38.** The French physicist Louis de Broglie in 1924 postulated that matter like radiation, should exhibit a dual behaviour. He proposed the following relationship between the wavelength  $\lambda$  of a material particle, its linear momentum  $P$  and Planck constant  $h$ .

$$\lambda = \frac{h}{p} = \frac{h}{mv}$$

The de Broglie relation states that the wavelength of a particle should decrease as its velocity increases. It also implies that for a given velocity heavier particles should have shorter wavelength than lighter particles. These waves are called de Broglie waves. These waves differ from electromagnetic waves as they:

- (i) have lower velocities
- (ii) have no electrical and magnetic fields and
- (iii) are not emitted by the particle under consideration.

The experimental confirmation of the de Broglie relation was obtained when Davisson and Germer in 1927, observed. As diffraction is a characteristic property of waves, hence the beam of electrons behave as a wave as proposed by de Broglie.



Werner Heisenberg considered the limits of how precisely we can measure properties of an electron or other microscopic particle like electron . He determined that there is a fundamental limit of how closely we can measure both position and momentum. The more accurately we can determine its position. The converse is also true. This is summed up in what we now call the "Heisenberg uncertainty principle" : It is impossible to determine simultaneously and precisely both the momentum and position of a particle. The product of uncertainty in the position,  $\Delta x$  and the uncertainty in the momentum  $\Delta(mv)$  must be greater than or equal to  $\frac{h}{4\pi}$ , i. e. ,

$$\Delta x \Delta(mv) \geq \frac{h}{4\pi}$$

If the uncertainty in velocity and posititon is same then the uncertainty in momentum will be :

A.  $\sqrt{\frac{hm}{4\pi}}$

B.  $m \cdot \sqrt{\frac{h}{4\pi}}$

C.  $\sqrt{\frac{h}{4\pi m}}$

D.  $\frac{1}{m} \sqrt{\frac{h}{4\pi m}}$

Answer: a



Watch Video Solution

## Match the column type

1. Match the following columns

Column-I		Column-II	
(a)	Frequency	(p)	Length of one complete wave per time period
(b)	Wavelength	(q)	Number of waves passing through a point in one second
(c)	Time period	(r)	Length of one complete wave
(d)	Speed	(s)	Time taken for one complete wave to pass through a point



Watch Video Solution

2. Match the following columns

Column-I		Column-II	
(a)	Binding energy of 5th excited state $\text{Li}^{++}$ sample	(p)	10.2 V
(b)	1st excitation potential of H-atom	(q)	3.4 eV
(c)	2nd excitation potential of $\text{He}^+$	(r)	13.6 eV
(d)	IE of H-atom	(s)	48.4 V

 [Watch Video Solution](#)

3. Match the following columns

Column-I		Column-II	
(a)	$n = 6 \rightarrow n = 3$ (in H-atom)	(p)	10 lines in the spectrum
(b)	$n = 7 \rightarrow n = 3$ (in H-atom)	(q)	Spectral lines in visible region
(c)	$n = 5 \rightarrow n = 2$ (in H-atom)	(r)	6 lines in the spectrum
(d)	$n = 6 \rightarrow n = 2$ (in H-atom)	(s)	Spectral lines in infrared region

 [Watch Video Solution](#)

4.  $E_n$  = total energy,  $l_n$  angular momentum

$K_n = K. E.$ ,  $V_n = P. E.$ ,

$T_n$  = time period,  $r_n$  = radius of nth orbit

Column-I		Column-II	
(a)	$E_n^{-y} \propto r_n$ then $y$ is	(p)	$\frac{1}{2}$
(b)	$l_n \propto n^x$ then $x$ is	(q)	-2
(c)	$\frac{E_n}{V_n}$	(r)	-3
(d)	$T_n \propto \frac{Z^t}{n^m}$ ; $t$ and $m$ are respectively	(s)	1



[View Text Solution](#)

Column-I		Column-II	
(a)	Aufbau principle	(p)	Line spectrum in visible region

5.

(b)	de Broglie	(q)	Maximum multiplicity of electron
(c)	Angular momentum	(r)	Photon
(d)	Hund's rule	(s)	$\lambda = h / (mv)$
(e)	Balmer series	(t)	Electronic configuration
(f)	Planck's law	(u)	$mvr$



Watch Video Solution

6. Match the following columns

Column-I		Column-II	
(a)	Cathode rays	(p)	Helium nuclei
(b)	Dumb-bell	(q)	Uncertainty principle
(c)	Alpha particles	(r)	Electromagnetic radiation
(d)	Moseley	(s)	p-orbital
(e)	Heisenberg	(t)	Atomic number
(f)	X-rays	(u)	Electrons



Watch Video Solution

7. Frequency =  $f_1$ , Time period = T, Energy of  $n^{\text{th}}$  orbit =  $E_n$ , radius of  $n^{\text{th}}$  orbit =  $r^n$ , Atomic number = Z, Orbit number = n :

Column-I	Column-II
(A) $f$	(p) $n^3$
(B) $T$	(q) $Z^2$
(E) $E_n$	(r) $\frac{1}{n^2}$
(D) $\frac{1}{r_n}$	(s) $Z$



Watch Video Solution

8. Match the following columns

Column-I		Column-II	
(a)	Lyman series of H-atom	(p)	Maximum number of different spectral lines observed = 6
(b)	Balmer series of H-atom	(q)	Maximum number of different spectral lines observed = 3
(c)	In a sample of H-atom for $5 \rightarrow 2$ transition	(r)	2nd line has wave number $\frac{8R}{9}$
(d)	In a single isolated H-atom for $5 \rightarrow 2$ transition	(s)	2nd line has wave number $\frac{3R}{16}$
		(t)	Total number of different spectral lines is 10



[Watch Video Solution](#)

9. Given in hydrogen atom  $r_n, V_n, E, K_n$  stand for radius, potential energy, total energy and kinetic energy in  $n^{\text{th}}$  orbit. Find the value of

U,v,x,y.

- (A)  $u = \frac{V_n}{K_n}$  (P) 1
- (B)  $\frac{1}{r_n} \propto E^x$  (Q) -2
- (C)  $r_n \propto Z^y$  (R) -1  
(Z = Atomic number)
- (D)  $v =$  (Orbital angular momentum of electron) (S) 0  
(in its lowest energy)



Watch Video Solution

10. Match the following columns

Column-I		Column-II	
(a)	Energy of ground state of $\text{He}^+$	(p)	+ 6.04 eV
(b)	Potential energy of 1st orbit of H-atom	(q)	- 27.2 eV
(c)	Kinetic energy of 2nd excited state of $\text{He}^+$	(r)	54.4 V
(d)	Ionisation potential of $\text{He}^+$	(s)	-54.4 eV



Watch Video Solution

Column-I		Column-II	
(a)	Electron moving in 2nd orbit of $\text{He}^+$ ion	(p)	Radius of orbit which $e^-$ is moving is $0.529 \text{ \AA}$
(b)	Electron moving in 3rd orbit of H-atom	(q)	Total energy of electron is $(-13.6 \times 9 \text{ eV})$
(c)	Electron moving in 1st orbit in $\text{Li}^{+2}$ ion	(r)	Velocity of electron is $\frac{2.188 \times 10^6}{3} \text{ m/sec}$
(d)	Electron moving in 2nd orbit in $\text{Be}^{+3}$ ion	(s)	de Broglie wavelength of electron is $\sqrt{\frac{150}{13.6}} \text{ \AA}$

11.

 [View Text Solution](#)

12.  $r_{n,z}$  = Radius of nth orbit of a single electron species having atomic number 'z'

$u_{n,z}$  = Velocity of electron in nth orbit of a single electron specie having atomic number 'z'

$E_{n,z}$  = Magnitude of total energy of electron in nth orbit of a single electron species having atomic number 'z'.

$K_{n,z}$  = Magnitude of kinetic energy of electron in nth orbit of a single electron species having atomic number 'z'

$P_{n,z}$  = Magnitude of potential energy of electron in nth orbit of a single



electron species having atomic number 'z'

$f_{n,z}$  = Frequency of electron in nth orbit of a single electron species having atomic number 'z'.

$T_{n,z}$  = Time period of electron in nth orbit of a single electron species having atomic number 'z'

Column-I		Column-II
(a) $\frac{f_{1,2}}{f_{1,1}}$	(p)	$\frac{r_{2,3}}{r_{1,3}}$
(b) $\frac{ E_{3,2} }{K_{3,1}}$	(q)	$\frac{T_{1,1}}{T_{1,2}}$
(c) $\left(\frac{1}{\sqrt{2}}\right) \left(\sqrt{\frac{P_{2,1}}{E_{3,1}}}\right)$	(r)	$2 \left(\sqrt{\frac{K_{2,3}}{ E_{1,2} }}\right)$
(d) $\left(\frac{E_{1,4}}{E_{2,2}}\right)$	(s)	$\frac{v_{2,3}}{v_{1,1}}$
	(t)	$4 \left(\frac{v_{2,5} - v_{2,1}}{v_{2,3} - v_{2,2}}\right)$



[View Text Solution](#)

13. If the shortest wavelength of spectral line of H-atom in Lyman series is x, then match the following for  $Li^{2+}$  and select the correct code.

List-I		List-II	
(p)	Shortest wavelength in Lyman series	(1)	$\frac{4x}{5}$
(q)	Longest wavelength in Lyman series	(2)	$\frac{4x}{9}$
(r)	Shortest wavelength in Balmer series	(3)	$\frac{x}{9}$
(s)	Longest wavelength in Balmer series	(4)	$\frac{4x}{27}$

Codes :

p q r s " p q r s

A. 2 4 1 3

B. 3 4 2 1

C. 3 4 1 2

D. 2 1 4 3

**Answer: (b)**



**Watch Video Solution**

14. In a scale of  $10^{-18}m$ , match the particle with respect to their probable size:

List-I		List-II	
(p)	Atom	(1)	1,000
(q)	Nucleus	(2)	10,000
(r)	Proton	(3)	100,000,000

Codes :

p q r " " p q r

A. 1 2 3

B. 3 2 1

C. 1 3 2

D. 2 3 1

**Answer: (b)**



[Watch Video Solution](#)

15. Match the entries in column- I with the correctly related quantum number (s) in column-II.

Column-I		Column-II	
(a)	Orbital angular momentum of the electron in a H-like system	(p)	Principal quantum number
(b)	A H-like one $e^-$ wave function obeying Pauli's principle	(q)	Azimuthal quantum number
(c)	Shape, size and orientation of H-like atomic orbitals	(r)	Magnetic quantum number
(d)	Probability density of electron at the nucleus in H-like atom	(s)	Electron spin quantum number

 [View Text Solution](#)

$$16. \Psi_r = k_1 e^{-r/k_2} (r^2 - 5k_3 r + 6K_3^2)$$

For the above orbital match the column-I with column-II (assuming  $k_3 = 1$ )

Column-I		Column-II	
(a)	Principal quantum number, $n$	(p)	3
(b)	Number of radial nodes	(q)	2
(c)	Number of sub-shells having energy between $(n+6)s$ to $(n+6)p$ for multi-electron system	(r)	4
(d)	Orbital angular momentum of given orbital	(s)	0

 [Watch Video Solution](#)

## Subjective Type

1. Assume that  $10^{-17}$  J of light energy is needed by the interior of the human eye to see an object . How many photons of green light ( $\lambda = 495nm$ ) are needed to generate this minimum energy .

$$[h = 6.6 \times 10^{-34} Js]$$

 [Watch Video Solution](#)

2. Average life time of a hydrogen atom excited to  $n = 2$  state is  $10^{-8}s$ . Find the number of revolutions made by the electron on an average before it jumps to the ground state. If your answer in scientific notation is  $x \times 10^y$ , then find the value of y.

 [Watch Video Solution](#)

3. Calculate ratio of wavelength for a proton and  $\alpha$  – particle . If their KE are same.



[Watch Video Solution](#)

4. With what velocity should an alpha ( $\alpha$ )- particle travel towards the nucleus of a copper atom arrive at a distance of  $10^{-13}m$  from the nucleus of the copper atom ?



[Watch Video Solution](#)

5. For a broadcasted electromagnetic wave having frequency of 1200 kHz, calculate number of waves that will be formed in 1 km distance (wave number per km).



[Watch Video Solution](#)

6. Visible spectrum contains light of following colours "Violet - Indigo - Blue - Green - Yellow - Orange - Red" (VIBGYOR).

Its frequency ranges from violet ( $7.5 \times 10^{14}Hz$ ) to re ( $4 \times 10^{14}Hz$ .)

Find out the maximum wavelength (inÅ) in this range.



[Watch Video Solution](#)

7. For a wave frequency is 10 Hz and wavelength is 2.5 m. How much distance (in metres) it will travel in 40 seconds?



[Watch Video Solution](#)

8. Calculate minimum value of uncertainty in position of a particle whose de broglie wavelength is  $\sqrt{\pi}\text{\AA}$  and uncertainty in de broglie wavelength is  $0.05\text{\AA}$ . Express your answer in Angstrom (" $\text{\AA}$ ").



[Watch Video Solution](#)

9. In a sample of H-atoms in ground state electrons make transition from ground state to a particular excited state where path length is 5 times de Broglie wavelength , electrons make back transition to the ground state producing all possible photons. If photon having 2nd highest energy of

this sample can be used to excite the electron in a particular excited state of  $Li^{2+}$  ion then find the final excited state of  $Li^{2+}$  ion .

 [Watch Video Solution](#)

**10.** A particular transition in hydrogen atom from a higher level 'A' to lower level 'B' causes a change in de Broglie wavelength which is 3 times the de Broglie wavelength in first Bohr orbit . Calculate total different wavelength possible if all possible transitions between level 'A' and level 'B' occur .

 [Watch Video Solution](#)

**11.** Calculate frequency of revolution of electron in 4th Bohr orbit  $Be^{+3}$  ion .

Given that  $\frac{\pi^2 m e^4 k^2}{h^3} = 1.62 \times 10^{15} \text{ sec}^{-1}$ , symbols have usual meaning.

Express your answers in terms of  $10^{15} \text{ sec}^{-1}$ .

Write the answer upto one significant figure.



[Watch Video Solution](#)





Watch Video Solution

12. If radiation corresponding to first line of "Balmer series" of  $He^+$  ion is subjected to a sample of  $Ki^{+2}$  ion (containing atoms in different energy states) and it causes ejection of photoelectron with non-zero kinetic energy then calculate least shell number in which the electron must be present in  $Li^{+2}$ .



Watch Video Solution

13. A sample of hydrogen contains equal number of  $H^1$ ,  $H^2$  and  $H^3$  atoms. The ratio of total number of protons and neutrons  $\left(\frac{p}{n}\right)$  in the sample is :



Watch Video Solution

14. A  $Li^{2+}$  ion is in a higher excited state of quantum number 'n' This excited ion can make a transition to the first excited state by successively

emitting two photons of energies 10.2 eV and 17.0 eV respectively . The value of 'n' is :

 [Watch Video Solution](#)

15. Two bulbs 'A' and 'B' emit red light and yellow light at  $8000 \text{ \AA}$  and  $4000 \text{ \AA}$  respectively. The number of photons emitted by both the bulbs per second is the same. If the red bulb is labelled as 100 watts, find the wattage of the yellow bulb.

 [Watch Video Solution](#)

16. Which state of triply ionised Beryllium ( $Be^{+++}$ ) the same orbital radius as that of the ground state hydrogen ?

 [Watch Video Solution](#)

17. Consider Bohr's theory for hydrogen atom . The magnitude of orbit angular momentum orbit radius and velocity of the electron in  $n$ th energy state in a hydrogen atom are  $l$  ,  $r$  and  $v$  respectively. Find out the value of 'x' if product of  $v$ ,  $r$  and  $l$  ( $vrl$ ) is directly proportional to  $n^x$ .

 [Watch Video Solution](#)

18. when an electron falls from  $(n + 2)$  state to  $(n)$  state in a  $He^+$  ion the photon emitted has energy  $6.172 \times 10^{-19}$  joules. What is the value of  $n$ ?

 [Watch Video Solution](#)

19. At what atomic number would a transition from  $n = 2$  to  $n = 1$  energy level result in emission of photon of  $\lambda = 3 \times 10^{-8}m$ ?

 [Watch Video Solution](#)

20. In a container a mixture is prepared by mixing of three samples of hydrogen helium ion ( $He^+$ ) and lithium ion ( $Li^{2+}$ ). In sample , all the hydrogen atoms are in 1st excited state and all the  $He^+$  ions are in third excited state and all the  $Li^{2+}$  ions are in fifth excited state. Find the total number of spectral lines observed in the emission spectrum of such a sample when the electrons return back to the ground state.

 [Watch Video Solution](#)

21. The uncertainty in position and velocity of the particle are 0.1 nm and  $5.27 \times 10^{-24} m s^{-1}$  respectively then find the approximate integral mass of the particle (in g) . ( $h = 6.625 \times 10^{-34} J s$ )

 [Watch Video Solution](#)

22. Wavelength of the Balmer  $H_\alpha$  line is 6565 "Å". Calculate the wavelength (in "Å") of  $H_\beta$  line of same hydrogen like atom.

 [Watch Video Solution](#)

23. Electrons in a sample of H-atoms make transition from state  $n=x$  to some lower excited state. The emission spectrum from the sample is found to contain only the line belonging to a particular series. If one of the photons has an energy of  $0.6375 \text{ eV}$ . Find the value of  $x$ .

$$\left[ \text{Take } 0.6375 \text{ eV} = \frac{3}{4} \times 0.85 \text{ eV} \right]$$

 Watch Video Solution

24. An electron in  $Li^{2+}$  ion makes a transition from higher state  $n_2$  to lower state  $n_1 = 6$ . The emitted photons is used to ionize an electron in H-atom from 2nd excited state. The electron on leaving the H-atom has a de Broglie wavelength  $\lambda = 12.016 \text{ \AA}$ . Find the value of  $n_2$ .

Note : Use  $(12.016)^2 = \frac{150 \times 144}{13.6 \times 11}$ ,  $\lambda_{\text{\AA}} = \sqrt{\frac{150}{KE_{\text{eV}}}}$

 Watch Video Solution

25. Nitrogen has an atomic number of 7 and oxygen has an atomic number of 8. The total number of electron in the nitrate ion ( $NO_3^-$ ) is :

 [Watch Video Solution](#)

26.  $\frac{h}{\pi}$  is the angular momentum of the electron in the  $n = \dots\dots\dots$  Orbit of  $He^+$ .

 [Watch Video Solution](#)

27. Electrons in the H-atoms jumps from some higher level to 3rd energy level . If six spectral lines are possible for the transition find the initial position of electron.

 [Watch Video Solution](#)

28. A light source of wavelength  $\lambda$  illuminates a metal and ejects photoelectron with  $(KE)^{\max} = 1eV$ .

Another light source of wave length  $\frac{\lambda}{3}$ , ejects

photoelectrons from same metal with  $(KE)^{\max} = 5eV$ .

Find the value of work function (eV) of metal.

 [Watch Video Solution](#)

29. Wavelength of radiowaves is 124 nm. Total number of photons per second produced by a source that consumes energy at the rate of 16W is  $x \times 10^{19}$ . the value of x is :

 [Watch Video Solution](#)

30. The ionisation potential of a hydrogen like species is 36 volt. What is the value of excitation energy from ground state to 1st excited state (in eV)?

 [Watch Video Solution](#)

31. The circumference of the second orbit of an atom or ion having single electron is 4 nm the de Broglie wavelength of electron (in nm) revolving in this orbit is :

 [Watch Video Solution](#)

32. The speed of this dust particle (mass =  $n10^{-3}g$ ) is measured with the uncertainty of  $\frac{3.313}{\pi} \times 10^{-3}m/s$ .

The minimum uncertainty in position of the dust particle (in order of  $10^{-26}m$ ) is :

 [Watch Video Solution](#)

33. X-rays emitted from a copper target and a molybdenum target are found to contain a line of wavelength  $22.85nm$  attributed to the  $K_{\alpha}$  line of an impurity element. The  $K_{\alpha}$  lines of a copper ( $Z = 29$ ) and



molybdenum ( $Z = 42$ ) have wavelength  $15.42nm$  and  $7.12nm$  respectively. Using Moseley's law,  $\gamma^{1/2} = a(Z - b)$ . Calculate the atomic number of the impurity element.

 [Watch Video Solution](#)

34. de Broglie wavelength ' $\lambda$ ' of an ideal gas molecule at any given temperature is given as  $\lambda \propto m^{-x} \times T^{-y}$ .

Where  $m$  = mass of one gas molecule,  $T$  = temperature (K).

Given  $x + y = ?$

 [Watch Video Solution](#)

35. Wavelength of electron waves in two Bohr orbits is in ratio 3:5 the ratio of kinetic energy of electron is 25 : x, hence x is :

 [Watch Video Solution](#)

36. Total different spectral lines observed in between 11th excited state and 3rd energy level in H-atom emission spectrum are:

 [Watch Video Solution](#)

37. On a metal with work function 2.0 eV light of wavelength 400 nm falls, maximum velocity of ejected photoelectron are  $6.22 \times 10^x m/s$ . . Hence x is :

 [Watch Video Solution](#)

38. By a sample of ground state atomic hydrogen ,UV light of energy  $\frac{13.6 \times 48}{49} \frac{eV}{\text{quanta}}$  is absorbed. How many different wavelengths will be observed in Balmer region of hydrogen spectrum?

 [Watch Video Solution](#)

39. ' $\alpha$  particle' of 3.6 MeV are fired toward nucleus  ${}^A_Z X$ , at point of closest separation distance between ' $\alpha$ particle' and 'X' is  $1.6 \times 10^{-14}m$ .

Calculate atomic number of 'X'.

$$\left[ \text{Given: } \frac{1}{4\pi\epsilon_0} = 9 \times 10^9 \text{ in S.I. units} \right]$$

 [Watch Video Solution](#)

40. Find the number of spectral lines in Paschen series emitted by atomic H, when electron is excited from ground state to 7th energy level returns back .

 [Watch Video Solution](#)

41. Calculate the minimum kinetic energy in eV of photoelectron produced in caesium by 400 nm light . The critical (maximum) wavelength for the photoelectric effect in caesium is 660 nm, when the potential difference is 1.78 V.

 [Watch Video Solution](#)

 Watch Video Solution

**42.** A beam of light has three  $\lambda$ ,  $4144\text{\AA}$ ,  $4972\text{\AA}$  and  $6216\text{\AA}$  with a total intensity of  $3.6 \times 10^{-3} \text{ W m}^{-2}$  equally distributed amongst the three  $\lambda$ . The beam falls normally on an area  $1.0 \text{ cm}^2$  of a clean metallic surface of work function  $2.3 \text{ eV}$ . Assume that there is no loss of light by reflection etc. Calculate the no. of photoelectrons emitted in  $2 \text{ sec}$ , in scientific notation,  $x \times 10^y$  find the value of  $y$ .



Watch Video Solution

**43.** A particle of charge equal to that of electron and mass  $208$  times the mass of the electron moves in a circular orbit around a nucleus of charge  $+3e$ . Assuming that the Bohr model of the atom is applicable to this system find the value of  $n$  for which the radius of the orbit is approximately the same as that of the first Bohr orbit of the hydrogen atom.



Watch Video Solution

44. Calculate the wavelength of a rested electron (in "Å") after it absorbs a photon of wavelength 9 nm.

[Given  $h = 6 \times 10^{-34} \text{ J} \cdot \text{sec}$ ,  $m = 9 \times 10^{-31} \text{ kg}$ ].

 [Watch Video Solution](#)

45. A hydrogen like species with atomic number 'Z' is in higher excited state 'n' and emits photons of energy 25.7 and 8.7 eV when making a transition to 1st and 2nd excited state respectively. Calculate value of 'n'.

 [Watch Video Solution](#)

46.  $\bar{r}$ , average distance also described as expectation value of the distance of the electron from the nucleus is different from  $r_{\text{max}}$ . For 1s orbital of H-atom,  $r_{\text{max}} = a_0$ ,  $\bar{r} = \frac{3}{2}a_0$ . For 2s orbital of H-atom  $r_{\text{max}} = 0.77a_0$  and  $5.23a_0$ . Find  $\bar{r}$  for  $r_{\text{max}} = 5.23a_0$ .

Also find  $\bar{r}_2$  for 1s orbital of  $Li^{2+}$  ion. Hence find the value of  $\frac{(\bar{r}_1 \times \bar{r}_2)}{a_0^2}$ .



[View Text Solution](#)

47. The number of lines of Balmer series of H-atom that belong to visible region.



[Watch Video Solution](#)

48. In a sample of three H-atoms, all in the 5th excited state, electrons make a transition to 1st excited state. The maximum number of different spectral lines observed will be :



[Watch Video Solution](#)

49. If a metal is exposed with light of wavelength  $\lambda$ , the maximum kinetic energy produced is found to be 2 eV. When the same metal is exposed to a

wavelength  $\frac{\lambda}{5}$  the maximum kinetic energy was found to be 14 eV. Find the value of work function (in eV).



Watch Video Solution

50. If  $n_1 + n_2 = 4$  and  $n_2^2 - n_1^2 = 8$ , then calculate maximum value of wavelength emitted in transition form  $n_2 \rightarrow n_1$  for  $Li^{2+}$  in nm [Given  $R_H = 10^7 m^{-1}$ ].



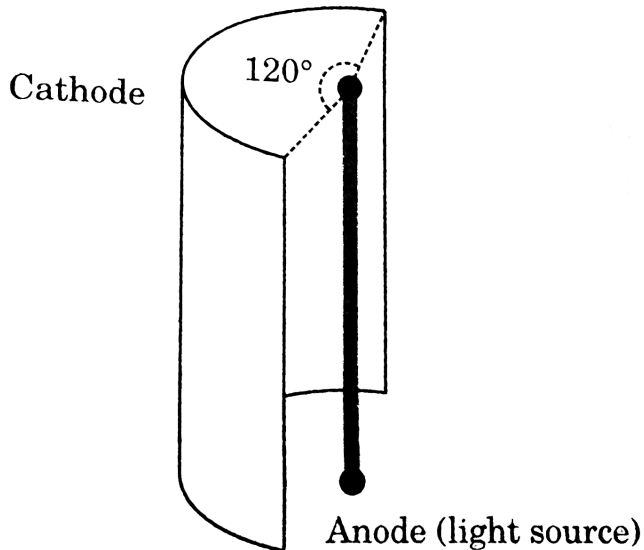
Watch Video Solution

51. Suppose the potential energy between electron and proton at a distance  $r$  is given by  $\frac{ke^2}{3r^3}$ . Use Bohr's theory to obtain energy of such a hypothetical atom.



Watch Video Solution

52. A cylindrical source of light which emits radiation radially (from curved surface) only, placed at the centre of hollow, metallic cylindrical surface, as shown in diagram.



The power of source is 90 watt and it emits light of wavelength  $4000\text{\AA}$  only . The emitted photons strike the metallic cylindrical surface which results in ejection of photoelectrons. All ejected photoelectrons reaches to anode (light source). The magnitude of photocurrent (in amp) is :

[Given:  $h = 6.4 \times 10^{-34} \text{ J/sec}$ ]

[▶ Watch Video Solution](#)

53. Calculate the energy (in KJ) required to excite one litre of hydrogen gas at 1 atm and 298 K to the first excited state of atomic hydrogen. The



energy for the dissociation of  $H - H$  is  $436 \text{ kJ mol}^{-1}$ . Give your answer excluding decimal places.

 [Watch Video Solution](#)

54. The work function ( $\phi$ ) of some metals is listed below. The number of metals which will show photoelectric effect when light of 300 nm wavelength falls on the metal is :

Metal	Li	Na	K	Mg	Cu	Ag	Fe	Pt	W
$\phi$ (eV)	2.4	2.3	2.2	3.7	4.8	4.3	4.7	6.3	4.75

 [Watch Video Solution](#)

55. The atomic masses of He and Ne are 4 and 20 amu respectively. The value of the de Broglie wavelength of He gas at  $-73.^\circ \text{C}$  is "M" times that of the de Broglie wavelength of Ne at  $727.^\circ \text{C}$ . M is

 [Watch Video Solution](#)

