

CHEMISTRY

BOOKS - GRB CHEMISTRY (HINGLISH)

CHEMICAL EQUILIBRIUM

STRAIGHT OBJECTIVE

1. In a reversible reaction $A \xrightleftharpoons[K_2]{K_1} B$ the initial concentration of A and B are a and b in moles per litre and the equilibrium concentrations are $(a-x)$ and $(b+x)$ respectively, Express x in terms of K_1 , K_2 , a and b .

A. $\frac{K_1a - K_2b}{K_1 + K_2}$

B. $\frac{K_1a - K_2b}{K_1 - K_2}$

C. $\frac{K_1a - K_2b}{K_1K_2}$

D. $\frac{K_1a + K_2b}{K_1 + K_2}$

Answer: A

 Watch Video Solution

2. The value of K_p for the reaction $2H_2O(g) + 2Cl_2(g) \rightleftharpoons 4HCl(g) + O_2(g)$ is 0.03 and at $427^\circ C$, when the partial pressures are expressed in atmospheres then the value of K_c for the same reaction is:

A. 5.22×10^{-4}

B. 7.34×10^{-4}

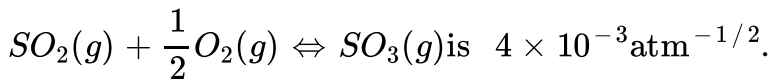
C. 3.2×10^{-3}

D. 5.43×10^{-5}

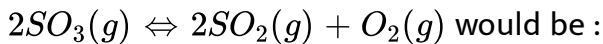
Answer: A

 Watch Video Solution

3. The equilibrium constant of the reaction



The equilibrium constant of the reaction



A. 250 atm

B. 4×10^3 atm

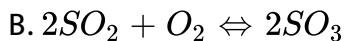
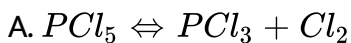
C. 0.25×10^4 atm

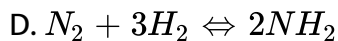
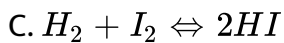
D. 6.25×10^4 atm

Answer: D

 [Watch Video Solution](#)

4. $\log \frac{K_p}{K_c} + \log RT = 0$ is a relationship for the reaction :

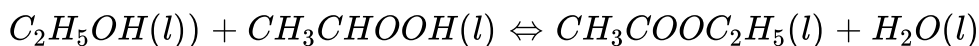




Answer: B

 [Watch Video Solution](#)

5. When ethyl alcohol ($C_2H_5OH(l)$) and acetic acid ($CH_3COOH(l)$) are mixed together in equimolar ratio at $27^\circ C$, 33% of each is converted into ester. Then the K_C for the equilibrium,



A. 4

B. $\frac{1}{4}$

C. 9

D. $\frac{1}{9}$

Answer: B



Watch Video Solution

6. Sulphide ion in alkaline solution reacts with solid sulphur to form polysulphide ions having formulae S_2^{2-} , S_3^{2-} , S_4^{2-} and so on. The equilibrium constant for the formation of S_3^{2-} is 132 (K_2), both from S and S^{2-} . What is the equilibrium constant for the formation of S_3^{2-} from S_2^{2-} and S?

A. 11

B. 12

C. 132

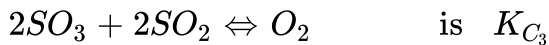
D. None of these

Answer: A



Watch Video Solution

7. Equilibrium constant for the reactions :



Then correct relation is :

A. $K_{C_3} = K_{C_1} \times K_{C_2}$

B. $K_{C_3} \times K_{C_1} \times K_{C_2}^2 = 1$

C. $K_{C_3} \times K_{C_1} \times K_{C_2} = 1$

D. $K_{C_3} = K_{C_1}^2 \times K_{C_2} = 1$

Answer: B



Watch Video Solution

8. The reaction $A + B \rightleftharpoons C + D$ is studied in a one litre vessel at $250^\circ C$. The initial concentration of A was $3n$ and that of B was n .

When equilibrium was attained, equilibrium concentration of C was

found to be equal to the equilibrium concentration of B. What is the concentration of D at equilibrium ?

A. $\frac{n}{2}$

B. $3n - \frac{1}{2}$

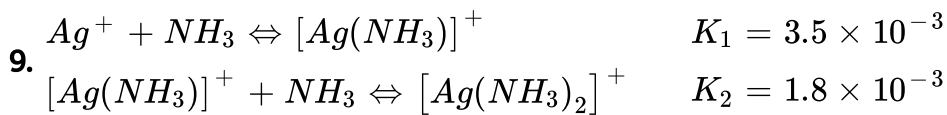
C. $n - \frac{n}{3}$

D. n

Answer: A



Watch Video Solution



then, the overall formation constant of $[Ag(NH_3)_2]^+$ is :

A. $6.3 \times 10^{-6} M$

B. $6.3 \times 10^6 M$

C. $6.3 \times 10^{-9} M$

D. None of these

Answer: A

 Watch Video Solution

10. $X_2(g) + Y_2(g) \rightleftharpoons 2XY(g)$ reaction was studied at a certain temperature. In the beginning, 1 mole of X_2 was taken in a one litre flask and 2 moles of Y_2 was taken in another 2 litre flask and both these containers are connected so that equilibrium can be established. What is the equilibrium concentration of X_2 and Y_2 ? Given Equilibrium concentration of $[XY]=0.6$ moles/litre.

A. $\left(\frac{1}{3} - 0.3\right), \left(\frac{2}{3} - 0.3\right)$

B. $\left(\frac{1}{3} - 0.6\right), \left(\frac{2}{3} - 0.6\right)$

C. $(1-0.3), (2-0.3)$

D. $(1-0.6), (2-0.6)$

Answer: A

 [Watch Video Solution](#)

11. For the reaction , $A + 2B \rightleftharpoons 2C$, the rate constant for the forward and the backward reactions are 1×10^{-4} and 2.5×10^{-2} respectively. The value of equilibrium constant, K , for the reaction would be :

A. 1×10^{-4}

B. 2.5×10^{-2}

C. 4×10^{-3}

D. 2.5×10^2

Answer: C

 [Watch Video Solution](#)

12. An equilibrium system for the reaction between hydrogen and iodine to give hydrogen iodide at 765 K in a 5 litre volume contains 0.4 mole of hydrogen, 0.4 mole of iodine and 2.4 moles of hydrogen iodide,

The equilibrium constant for the reaction is :



A. 36.0

B. 15.0

C. 0.067

D. 0.28

Answer: A

 [Watch Video Solution](#)

13. For a gaseous reaction, $2A + B \rightleftharpoons 2C$, the partial pressures of A, B and C at equilibrium are 0.3 atm, 0.4 atm and 0.6 atm respectively. The value of K_P for the reaction would be :

A. 10atm^{-1}

B. $\frac{1}{10}\text{atm}^{-1}$

C. 0.2atm^{-1}

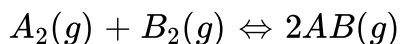
D. 5atm^{-1}

Answer: A

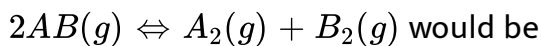


Watch Video Solution

14. The equilibrium constant for the reaction



is 20 at 500K. The equilibrium constant for the reaction



A. 20

B. 0.5

C. 0.05

D. 10

Answer: C

 [Watch Video Solution](#)

15. A reaction has a forward rate constant of $2.3 \times 10^6 \text{ s}^{-1}$ and an equilibrium constant of 4.0×10^8 . What is the rate constant for the reverse reaction ?

A. $1.1 \times 10^{-15} \text{ s}^{-1}$

B. $5.8 \times 10^{-3} \text{ s}^{-1}$

C. $1.7 \times 10^2 \text{ s}^{-1}$

D. $9.2 \times 10^{14} \text{ s}^{-1}$

Answer: D

 [Watch Video Solution](#)

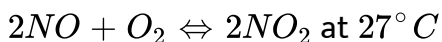
16. For the reaction $N_2O_4 \rightleftharpoons 2NO_2$, at 350 K, the value of $K_c = 0.4$. The value of K_p for the reaction at the same temperature would be :

- A. 11.48 atm
- B. 1.148 atm
- C. 1.4×10^{-2} atm
- D. 1.4×10^{-3} atm

Answer: A

 [Watch Video Solution](#)

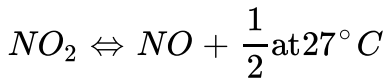
17. For an elementary gaseous phase reaction :



Rate of the forward reaction is given by rate = $2 \times 10^3 [NO]^2 [O_2]$ and

rate of reverse reaction at is given by rate = $20 [NO_2]^2$

Hence, equilibrium constant for reaction



A. 100

B. 0.01

C. 0.1

D. 10

Answer: C



Watch Video Solution

18. The value of K_p for the reaction, $A(g) + 2B(g) \rightleftharpoons C(g)$ is 25 atm^{-2} at a certain temperature. The value of K_p for the reaction, $\frac{1}{2}C(g) \rightleftharpoons \frac{1}{2}A(g) + B(g)$ at the same temperature would be :

A. 25 atm^{-1}

B. $\frac{1}{25} \text{ atm}^{-1}$

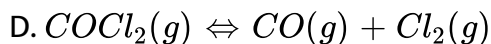
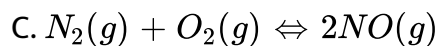
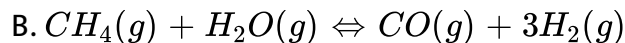
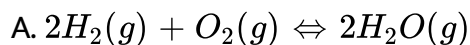
C. $\frac{1}{5} \text{atm}^{-1}$

D. 5 atm

Answer: C

 [Watch Video Solution](#)

19. For which of the following equilibria, is $K_p = K_c$?



Answer: C

 [Watch Video Solution](#)

20. For a reaction, $H_2 + I_2 \rightleftharpoons 2HI$ at 721 K, the value of equilibrium constant is 50. If 0.5 moles each of H_2 and I_2 is added to the system the value of equilibrium constant will be :

A. 0.02

B. 0.2

C. 50

D. 25

Answer: C

 [Watch Video Solution](#)

21. In a reaction $A + 2B \rightleftharpoons 2C$, 2.0 mole of 'A', 3.0 mole of 'B' and 1 mole of 'C' are placed in a 2.0 L flask and the equilibrium concentration of 'C' is 1.0 mole/L. The equilibrium constant (K) for the reaction is :

A. 0.33

B. 1.33

C. 1.66

D. 0.66

Answer: B

 [Watch Video Solution](#)

22. The theoretically computed equilibrium constant for the polymerisation of formaldehyde to glucose in aqueous solution :

$6HCHO \rightleftharpoons C_6H_{12}O_6$ is 1.0×10^{24} If 1 M-solution of glucose was taken, what should be the equilibrium concentration of formaldehyde ?

A. $6.0 \times 10^{-4} M$

B. $1.0 \times 10^{-4} M$

C. $1.0 \times 10^4 M$

D. $\left(\frac{1}{6}\right)^{1/6} \times 10^{-4} M$

Answer: B

 [Watch Video Solution](#)

23. For the equilibrium :

$NH_2COONH_4(s) \rightleftharpoons N_2(g) + 3H_2(g) + CO(g) + \frac{1}{2}O_2(g)$ the value of K_p is $27 \times 2^{\lambda/2} \text{atm}^{11/2}$ at 800 K and the equilibrium pressure of 22 atm. The value of λ is :

A. 11

B. 21

C. 5.5

D. 10.5

Answer: B

 [Watch Video Solution](#)

24. For the homogeneous reaction: $4NH_3 + 5O_2 \rightleftharpoons 4NO + 6H_2O$

The equilibrium constant K_c has the units of :

A. $(Conc.)^{-10}$

B. $(Conc.)^1$

C. $(Conc.)^{-1}$

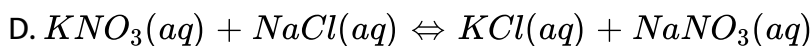
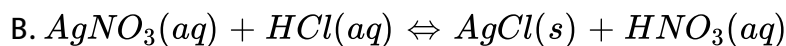
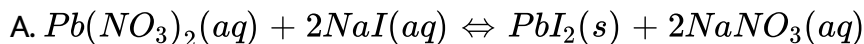
D. It is dimensionless

Answer: B



Watch Video Solution

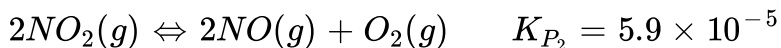
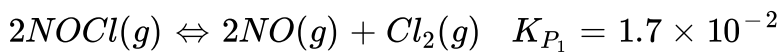
25. An example of a reversible reaction is



Answer: D

 Watch Video Solution

26. Determine the value of equilibrium constant for this reaction :
 $2NOCl(g) + O_2(g) \rightleftharpoons 2NO_2(g) + Cl_2(g)$ from the K_p values for these reactions.



A. 1.0×10^{-6}

B. 1.0×10^{-3}

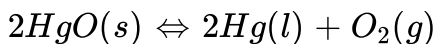
C. 3.5×10^{-3}

D. 2.9×10^2

Answer: D

 Watch Video Solution

27. What is the equilibrium expression for this reaction ?



A. $K = \frac{[\text{Hg}][\text{O}_2]}{[\text{HgO}]}$

B. $K = \frac{[\text{Hg}]^2[\text{O}_2]}{[\text{HgO}]^2}$

C. $K = [\text{Hg}]^2[\text{O}_2]$

D. $K = [\text{O}_2]$

Answer: D



Watch Video Solution

28. For the reaction , $A + B \rightleftharpoons 3C$, if 'a' mol/litre of each 'A' and 'B' are taken initially then at equilibrium the incorrect relation is :

A. $[\text{A}]-[\text{B}]=0$

B. $3[\text{B}]+[\text{C}]=3a$

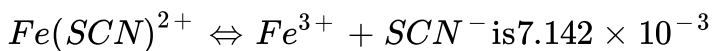
C. $3[\text{A}]+[\text{C}]=3a$

$$D. [A]+[B]=3[C]$$

Answer: D

 Watch Video Solution

29. The average person can see the red colour imparted by the complex $[Fe(SCN)]^{2+}$ to an aqueous solution if the concentration of the complex is 6×10^{-6} M or greater. What minimum concentration of KSCN would be required to make it possible to detect 1 ppm (part per million) of Fe(III) in a natural water sample? The instability constant for



A. $0.0036M$

B. $0.0037M$

C. $0.0035M$

D. None of these

Answer: A



[View Text Solution](#)

30. The active mass of $64g$ of HI in a $2 - L$ flask would be

A. 2

B. 1

C. 5

D. 0.25

Answer: D



[Watch Video Solution](#)

31. The equilibrium $N_2(g) + O_2(g) \rightleftharpoons 2NO(g)$ is established in a reaction vessel of $2.5 L$ capacity. The amounts of N_2 and O_2 taken at

the start were respectively 2 moles and 4 moles. Half a mole of nitrogen has been used up at equilibrium. The molar concentration of nitric oxide is:

A. 0.2

B. 0.4

C. 0.6

D. 0.1

Answer: B

 [Watch Video Solution](#)

32. For a reaction : $A(g) + 2B(g) \rightleftharpoons C(g) + D(g) + E(g)$, $K_{eq} = 2$

Calculate equilibrium concentration of B if initially 10 moles of A are mixed with 20 moles of b in a 2 litre rigid container.

A. $\frac{20}{3}$ M

B. $\frac{10}{3}M$

C. $\frac{40}{3}M$

D. $\frac{4}{3}M$

Answer: B

 [Watch Video Solution](#)

33. An equilibrium is established SO_2 , O_2 and SO_3 as $SO_2(g) + \frac{1}{2}O_2(g) \rightleftharpoons SO_3(g)$ starting with 2 moles SO_2 and 1.5 moles O_2 in 5 litre flask. The equilibrium mixture required 0.4 moles of $KMnO_4$ in acidic medium. The value of K_C° is :

A. 5

B. $\sqrt{5}$

C. 25

D. 0.2

Answer: B



[Watch Video Solution](#)

34. In the following reaction started only with A_B , $2A_B(g) \rightleftharpoons 3A_2(g) + A_4(g)$ mole fraction of A_2 is found to 0.36 at a total pressure of 100atm at equilibrium. The mole fraction of $A_B(g)$ at equilibrium is :

A. 0.28

B. 0.72

C. 0.18

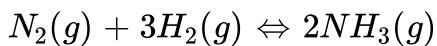
D. None of these

Answer: A



[Watch Video Solution](#)

35. For the reversible reaction



at $500^\circ C$, the value of K_p is 1.44×10^{-5} when the partial pressure is measured in atmosphere. The corresponding value of K_c with concentration in $\text{mol } L^{-1}$ is

A. $\frac{1.44 \times 10^{-5}}{(0.082 \times 500)^{-2}}$

B. $\frac{1.44 \times 10^{-5}}{(8.314 \times 773)^{-2}}$

C. $\frac{1.44 \times 10^{-5}}{(0.082 \times 773)^2}$

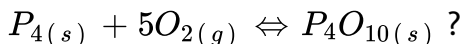
D. $\frac{1.44 \times 10^{-5}}{(0.082 \times 773)^{-2}}$

Answer: D



Watch Video Solution

36. What is the equilibrium expression for the reaction



$$\text{A. } K_C = \frac{[P_4O_{10}]}{[P_4][O_2]^5}$$

$$\text{B. } K_C = \frac{1}{([O_2])^5}$$

$$\text{C. } K_C = [O_2]^5$$

$$\text{D. } K_C = \frac{[P_4O_{10}]}{5[P_4][O_2]}$$

Answer: B

 [Watch Video Solution](#)

37. For the reaction , $CO(g) + Cl(g) \rightleftharpoons COCl_2(g)$ then K_p/K_c is equal to :

$$\text{A. } \frac{1}{RT}$$

$$\text{B. } 1.0$$

$$\text{C. } \sqrt{RT}$$

$$\text{D. } RT$$

Answer: A

 [Watch Video Solution](#)

38. The equilibrium constant for the reaction $N_2(g) + O_2(g) \rightleftharpoons 2NO(g)$ at temperature T is 4×10^{-4} . The value of K_C for the reaction, $NO(g) \rightleftharpoons \frac{1}{2}N_2(g) + \frac{1}{2}O_2(g)$ at the same temperature is :

A. 2.5×10^2

B. 0.02

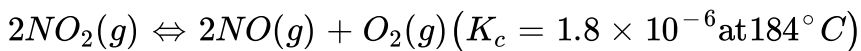
C. 4×10^{-4}

D. 50

Answer: D

 [Watch Video Solution](#)

39. For the reaction,



$$(R = 0.0831 \text{ Latmmol}^{-1} K^{-1})$$

When K_P and K_c are compared at $184^\circ C$ it is found that

- A. Whether K_P is greater than, less than or equal to K_c depends upon the total gas pressure
- B. $K_P = K_C$
- C. K_P is less than K_C
- D. K_P is greater than K_C

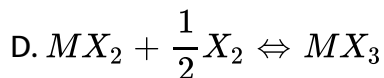
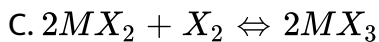
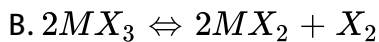
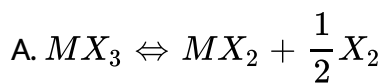
Answer: D



Watch Video Solution

40. Select the reaction for which the equilibrium constant is written as





Answer: C

 [Watch Video Solution](#)

41. For the following gaseous equilibrium, $N_2O_4(g) \Leftrightarrow 2NO_2(g)$

K_P is found to be equal to K_c This is attained when temperature is :

A. $0^\circ C$

B. 273 K

C. 1 K

D. 12.19 K

Answer: D



Watch Video Solution

42. For the reaction $3A(g) + B(g) \rightleftharpoons 2C(g)$ at a given temperature , $K_c = 9.0$. What must be the volume of the flask, if a mixture of 2.0 mol each of A, B and C exist in equilibrium ?

A. 6 L

B. 9 L

C. 36 L

D. None of these

Answer: A



Watch Video Solution

43. N_2 and H_2 are taken in 1:3 molar ratio in a closed vessel to attain the following equilibrium, $N_2(g) + 3H_2(g) \rightleftharpoons 2NH_3(g)$

Find K_p for reaction at total pressure of $2P$ if P_{N_2} at equilibrium is $\frac{P}{3}$:

A. $\frac{1}{3P^2}$

B. $\frac{4}{3P^2}$

C. $\frac{4P^2}{3}$

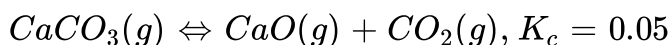
D. None of these

Answer: B



[Watch Video Solution](#)

44. What is the minimum mass of $CaCO_3(s)$, below which it decomposes completely, required to establish equilibrium in a 6.50 litre container for the reaction :



A. 32.5 g

B. 24.5 g

C. 40.9 g

D. 8.0 g


Answer: A



Watch Video Solution

45. Which of the following is correct for the equilibrium of the reaction

?



A. $p_{H_2} \propto p_{H_2O}$

B. $p_{H_2} \propto \sqrt{p_{H_2O}}$

C. $p_{H_2} \propto p_{H_2O}^2$

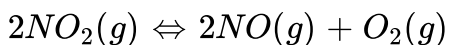
D. $p_{H_2} \propto \frac{p_{H_2O}^2}{p_{CO}}$

Answer: B



[Watch Video Solution](#)

46. A sample of pure NO_2 gas heated to 1000 K decomposes :



The equilibrium constant K_P is 100 atm. Analysis shows that the partial pressure of O_2 is 0.25 atm. At equilibrium. The partial pressure of NO_2 at equilibrium is:

A. 0.03

B. 0.25

C. 0.025

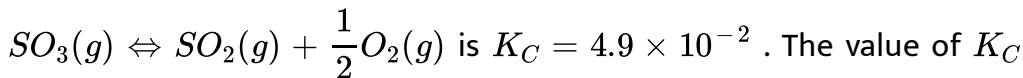
D. 0.04

Answer: C



[Watch Video Solution](#)

47. The equilibrium constant for the reaction,



for the reaction $2SO_2(g) + O_2 \rightleftharpoons 2SO_3(g)$ will be :

A. 416

B. 2.40×10^{-3}

C. 9.8×10^{-2}

D. 4.9×10^{-2}

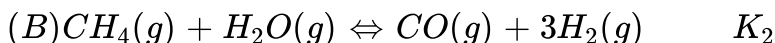
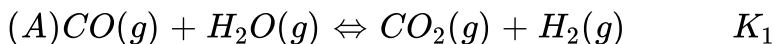
Answer: A



Watch Video Solution

48. The equilibrium constant for the reaction a,b and c equilibrium

constants are given :



Which of the following relations is correct ?

A. $K_2K_3 = K_1$

B. $K_3 = K_1K_2$

C. $K_3K_2^3 = K_1^2$

D. $K_1 = \sqrt{K_2} = K_3$

Answer: B



Watch Video Solution

49. If $10^{-4}dm^3$ of water is introduced into a $1.0dm^3$ flask to $300K$ how many moles of water are in the vapour phase when equilibrium is established ? (Given vapour pressure of H_2O at $300K$ is $3170Pa$ $R = 8.314JK^{-1}mol^{-1}$).

A. $5.56 \times 10^{-3}mol$

B. $1.53 \times 10^{-2}mol$

C. $4.46 \times 10^{-2}mol$

D. $1.27 \times 10^{-3} \text{ mol}$

Answer: D

 [Watch Video Solution](#)

50. For the reaction equilibrium , $N_2O_4(g) \rightleftharpoons 2NO_2(g)$ the concentrations of N_2O_4 and NO_2 at equilibrium are 4.8×10^{-2} and $1.2 \times 10^{-2} \text{ molL}^{-1}$ respectively. The value of K_C for the reaction is :

A. $3.3 \times 10^2 \text{ molL}^{-1}$

B. $3 \times 10^{-1} \text{ molL}^{-1}$

C. $3 \times 10^{-3} \text{ molL}^{-1}$

D. $3 \times 10^3 \text{ molL}^{-1}$

Answer: C

 [Watch Video Solution](#)

51. An amount of solid NH_4HS is placed in a flask already containing ammonia gas at a certain temperature and 0.50 atm pressure. Ammonium hydrogen sulphide decomposes to yield NH_3 and H_2S gases in the flask. When the decomposition reaction reaches equilibrium, the total pressure in the flask rises to 0.84 atm ? The equilibrium constant for NH_4HS decomposition at this temperature is :

- A. 0.11
- B. 0.17
- C. 0.18
- D. 0.30

Answer: A



[Watch Video Solution](#)

52. $N_2(g) + 3H_2(g) \rightleftharpoons 2NH_3(g)$. This is a gaseous phase reaction taking place in 1 L flask at $127^\circ C$. Starting with 1 mole of N_2 and 3 mole of H_2 , the equilibrium mixture obtained is such that if it is titrated requires 500 mL of 1.0 M H_2SO_4 for neutralisation. Which of the following is the most appropriate K_C ?

A. 0.03

B. 0.59

C. 0.27

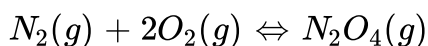
D. 0.11

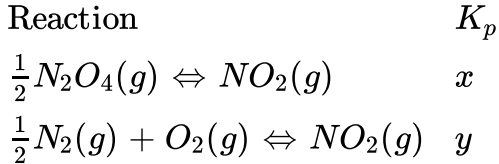
Answer: B



[Watch Video Solution](#)

53. What is the value of K_p for the following reaction





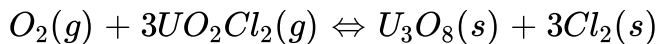
- A. $\frac{y}{x}$
- B. $\frac{y^2}{x^2}$
- C. $\frac{x^2}{y^2}$
- D. xy^2

Answer: B



Watch Video Solution

54. What is the ratio K_c / K_p for the following reaction at $723^\circ C$?

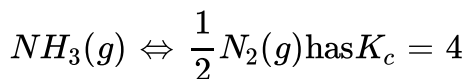


- A. 0.0122
- B. 1.00
- C. 59.4

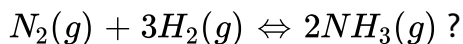
Answer: D

 Watch Video Solution

55. At 527°C the reaction :



What is K_p for the reaction :



A. $16 \times (800R)^2$

B. $\left(\frac{800R}{4}\right)^{-2}$

C. $\left(\frac{527R}{4}\right)^2$

D. None of these

Answer: D

 Watch Video Solution

56. Ammonium hydrogen sulphide dissociates according to the equation :



The total pressure at equilibrium at 400 K is found to be 1 atm. The equilibrium constant K_p of the reaction is :

A. 1 atm^2

B. 0.25 atm^2

C. 0.5 atm

D. 0.25 atm

Answer: B



[Watch Video Solution](#)

57. N_2 and O_2 combine at a given temperature to produce NO . At equilibrium the yield of NO is 'x' percent by volume. If $x = \sqrt{Ka \cdot b} - \frac{K(a + b)}{4}$, where K is the equilibrium constant of the given reaction at the given temperature and a and b are the volume percentage of N_2 and O_2 , respectively, in the initial state. Report. Report the maximum value of K at which X is maximum

- A. $K=1$
- B. $K=2$
- C. $K=4$
- D. $K=16$

Answer: C



Watch Video Solution

58. The K_p for following reaction is $2.25 \times 10^{-2} \text{ atm}^2$



The value of equilibrium pressure (in atm) above $\text{NH}_4\text{CN}(s)$ is :

A. 0.15

B. 0.3

C. 15

D. 30

Answer: B



[Watch Video Solution](#)

59. Calculate K_c for the reaction $\text{KI} + \text{I}_2 \rightleftharpoons \text{KI}_3$. Given that initial weight of KI is 1.326g weight of KI_3 is 0.105g and number of moles of free I_2 is 0.0025 at equilibrium the volume of solution is 1 – L.

A. 0.032

B. 0.024

C. 0.064

D. 0.012

Answer: A



Watch Video Solution

60. When 3 moles of A and 1 mole of B are mixed in 1 litre vessel, the following reaction takes place $A_{(g)} + B_{(g)} \rightleftharpoons 2C_{(g)}$. 1.5 moles of C are formed. The equilibrium constant for the reaction is

A. 0.12

B. 0.25

C. 0.50

D. 4.0

Answer: D



Watch Video Solution

61. 0.5 moles of N_2 gas is mixed with 0.72 moles of O_2 gas in a 2 litre tank at 2000 K. The two gases react as :
 $N_2(g) + O_2(g) \rightleftharpoons 2NO(g)$, $K_p = 4.9 \times 10^{-5}$ at 2000 K. The equilibrium concentration of $NO(g)$ will be :

A. $4.2 \times 10^{-3} M$

B. $6.3 \times 10^{-3} M$

C. $2.1 \times 10^{-3} M$

D. $7 \times 10^{-3} M$

Answer: C



Watch Video Solution

62. For the reaction,

$C_2H_6(g) \rightleftharpoons C_2H_4(g) + H_2(g)$. K_p is 0.05 at 900 K. If an initial

mixture comprising 20 mol of C_2H_6 and 80 mol of inert gas is passed

over a dehydrogenation catalyst at 900 K, what is the equilibrium mole

percentage of C_2H_6 in the gas mixture ? The total pressure is kept at

0.5 bar :

A. 4.3

B. 9.67

C. 8.76


D. 72.5

Answer: C



[View Text Solution](#)

63. At a certain temperature the following equilibrium is established



One mole of each of the four gases is mixed in one litre container and the reaction is allowed to reach equilibrium state. When excess of baryta water $[Ba(OH_2)]$ is added to the equilibrium mixture, the weight of white precipitate obtained is 236.4 gm. The equilibrium constant K_c of the following reaction is:

- A. 1.2
- B. 2.25
- C. 2.1
- D. 3.6

Answer: B

 [Watch Video Solution](#)

64. For a system in equilibrium, the rate constant for the forward reaction is represented by K_f and the rate constant for the reverse reaction is represented by K_r . Which equation represents the equilibrium constant for this reaction in the forward direction ?

A. $K_{eq} = K_f \cdot K_r$

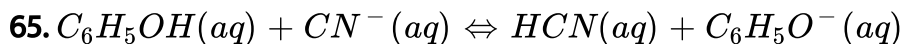
B. $K_{eq} = \frac{K_f}{K_r}$

C. $K_{eq} = \frac{K_r}{K_f}$

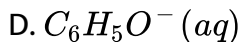
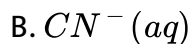
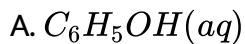
D. $K_{eq} = \frac{1}{K_f \cdot K_r}$

Answer: B

 [Watch Video Solution](#)



The equilibrium constant for this reaction is less than 1. What is the strongest base in this system ?



Answer: D



Watch Video Solution

66. 1.00 g of water is introduced into a 5.00 L evacuated flask at $50^\circ C$.

Vapour Pressure at $50^\circ C$

H_2O 92.5mmHg

What mass of water is present as liquid when equilibrium is established ?

A. 0.083 g

B. 0.41 g

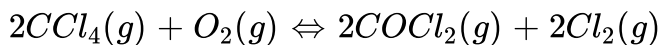
C. 0.59 g

D. 0.91 g

Answer: C

 Watch Video Solution

67. For the reaction



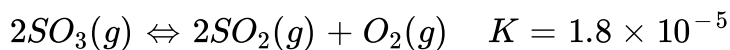
What is the equilibrium expression, K_c ?

- A. $K_c = \frac{[\text{COCl}_2][\text{Cl}_2]}{[\text{CCl}_4][\text{O}_2]}$
- B. $K_c = \frac{2[\text{COCl}_2][\text{Cl}_2]}{[\text{CCl}_4][\text{O}_2]}$
- C. $K_c = \frac{[\text{COCl}_2][\text{Cl}_2]^2}{[\text{CCl}_4][\text{O}_2]}$
- D. $K_c = \frac{[\text{COCl}_2]^2[\text{Cl}_2]^2}{[\text{CCl}_4]^2[\text{O}_2]}$

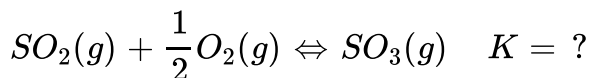
Answer: D

 Watch Video Solution

68. Based on the equilibrium constant for the reaction below :



What is the equilibrium constant for the reaction



A. 2.1×10^{-3}

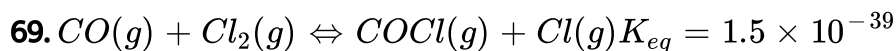
B. 4.2×10^{-3}

C. 2.4×10^2

D. 5.6×10^4

Answer: D

 [Watch Video Solution](#)



If the rate constant , K, for the forward reaction is

$1.4 \times 10^{-28} \text{ L mol}^{-1} \text{ sec}^{-1}$ what is K (in $\text{L mol}^{-1} \text{ sec}^{-1}$) for the backward reaction ?

A. 2.1×10^{-67}

B. 1.0×10^{-11}

C. 9.3×10^{10}

D. 7.1×10^{27}

Answer: C



Watch Video Solution

70. Which statement is true for a reaction at equilibrium ?

A. All reaction ceases

B. The reaction has gone to completion

C. The rates of the forward and reverse reactions are equal

D. The amount of product equals the amount of reactant.

Answer: C

 Watch Video Solution

71. For the hypothetical reaction, $2A(s) + B(g) \rightleftharpoons 3C(g)$

What is the equilibrium expression ?

A. $K = \frac{[C]^3}{[A]^2[B]}$

B. $K = \frac{3[C]}{2[A][B]}$

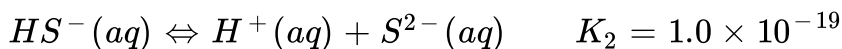
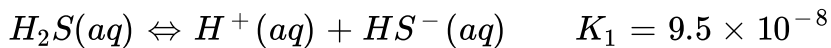
C. $K = \frac{[C]^3}{[A]^2 + [B]}$

D. $K = \frac{[C]^3}{[B]}$

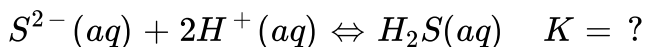
Answer: D

 Watch Video Solution

72. Equilibrium const.



What is the equilibrium constant for the reaction ?



A. 9.5×10^{-27}

B. 9.7×10^{-14}

C. 9.5×10^{11}

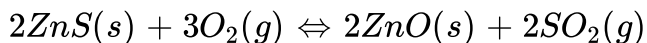
D. 1.0×10^{26}

Answer: D



Watch Video Solution

73. What is the equilibrium expression for this reaction ?



$$\text{A. } K = \frac{2[\text{SO}_2]}{3[\text{O}_2]}$$

$$\text{B. } K = \frac{[\text{SO}_2]^2}{[\text{O}_2]^3}$$

$$\text{C. } K = \frac{2[\text{ZnO}][\text{SO}_2]}{3[\text{ZnS}][\text{O}_2]}$$

$$\text{D. } K = \frac{[\text{ZnO}]^2[\text{SO}_2]^2}{[\text{ZnS}]^2[\text{O}_2]}$$

Answer: B

 [Watch Video Solution](#)

74. For the hypothetical equilibrium reactions ,

$A \rightleftharpoons B$, $K_1 = 2.0$, $B \rightleftharpoons C$, $K_2 = 0.010$. What is the value of K for the reaction , $2C \rightarrow 2A$?

A. 2500

B. 50

C. 25

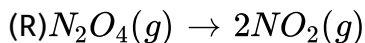
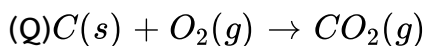
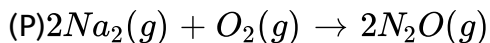
D. 4.0×10^{-4}

Answer: A



Watch Video Solution

75. For which reaction is $K_p = K_c$?



A. Q only

B. R only

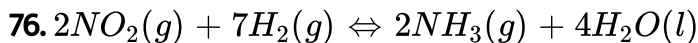
C. P and R only

D. Q and R only

Answer: A



Watch Video Solution



What is the correct equilibrium expression for this reaction ?

A. $K_C = \frac{[NH_3]^2}{[NO_2]^2[H_2]^7}$

B. $K_C = \frac{[NO_2]^2[H_2]^7}{[NO_3]^2}$

C. $K_C = \frac{[NH_3]^2[H_2O]^4}{[NO_2]^2[H_2]^7}$

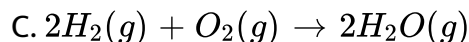
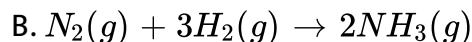
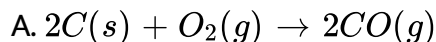
D. $K_C = \frac{[NH_3]^2[H_2O]^4}{[NO_2]^2}$

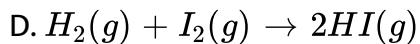
Answer: A



Watch Video Solution

77. For which reaction does $K_p = K_c$?





Answer: D

 [Watch Video Solution](#)

78. Which statement is correct about a system at equilibrium ?

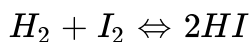
- A. The forward and reverse reactions occur at identical rates
- B. The concentrations of reactants must equal the concentrations of the products.
- C. The concentrations of reactants and products can be changed by adding a catalyst
- D. The concentrations of reactants and products are not affected by a change in temperature.

Answer: A



[Watch Video Solution](#)

79. When 2.00 mol each of $H_2(g)$ and $I_2(g)$ are reacted in a 1.00 L container at a certain temperature, 3.50 mol of HI is present at equilibrium. Calculate the value of the equilibrium constant, K_c for the reaction :



A. 3.7

B. 14

C. 56

D. 2.0×10^2

Answer: D

[Watch Video Solution](#)

80. What is the K_{eq} expression for the reaction,
 $C(s) + CO_2(g) \rightarrow 2CO(g)$?

A. $K_{eq} = \frac{2[CO]}{[CO_2]}$

B. $K_{eq} = \frac{2[CO][CO]}{[CO_2]}$

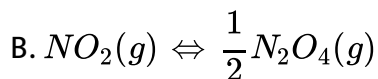
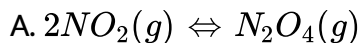
C. $K_{eq} = \frac{[CO]^2}{[CO_2]}$

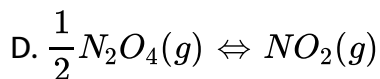
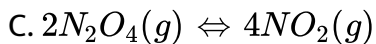
D. $K_{eq} = \frac{[C][CO]^2}{[CO_2]}$

Answer: C

 [Watch Video Solution](#)

81. The equilibrium system, $N_2O_4(s) \rightleftharpoons 2NO_2(g)$, has $K_p = 11$. For which equilibrium system is $K_p = 0.091$?

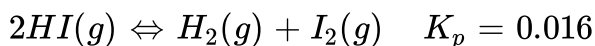




Answer: A

 [Watch Video Solution](#)

82. A 1.0 L evacuated tank is charged with HI(g) to a pressure of 1.0 atm at 793 K. Some of the HI(g) forms $H_2(g)$ and $I_2(g)$ according to the equilibrium :



What is the pressure (in atm) of HI at equilibrium ?

A. 0.11

B. 0.13

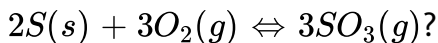
C. 0.80

D. 1.6

Answer: C

 Watch Video Solution

83. What is the equilibrium expression K_c , for the reaction :



A. $K_c = \frac{2[SO_3]}{(2[S] + 3[O_2])}$

B. $K_c = \frac{2[SO_3]}{3[O_2]}$

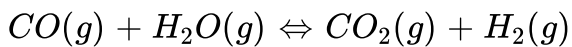
C. $K_c = \frac{2[SO_3]^2}{[S]^2 + [O_2]^3}$

D. $K_c = \frac{[SO_3]^2}{[O_2]^3}$

Answer: D

 Watch Video Solution

84. A 2.0 L container is charged with a mixture of 6.0 moles of $\text{CO}(g)$ and 6.0 moles of $\text{H}_2\text{O}(g)$ and the following reaction takes place :



When equilibrium is reached the $[\text{CO}_2]=2.4 \text{ M}$. What is the value of K_c for the reaction ?

A. 16

B. 4.0

C. 0.25

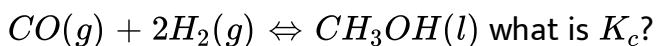
D. 0.063

Answer: A



Watch Video Solution

85. For the equilibrium system :



$$\text{A. } K_c = \frac{[\text{CH}_3\text{OH}]}{2[\text{CO}][\text{H}_2]}$$

$$\text{B. } K_c = \frac{[\text{CH}_3\text{OH}]}{[\text{CO}][\text{H}_2]^2}$$

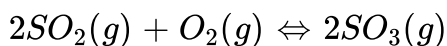
$$\text{C. } K_c = \frac{1}{2[\text{CO}][\text{H}_2]}$$

$$\text{D. } K_c = \frac{1}{[\text{CO}][\text{H}_2]^2}$$

Answer: D

 [Watch Video Solution](#)

86. Consider the reaction carried out at constant volume :



For initial concentrations of SO_2 and O_2 of 2.0 M and 1.5 M, respectively, the equilibrium O_2 concentrations is 0.80 M. What is the value of K_c for this reactions ?

A. 6.8

B. 2.9

C. 0.34

D. 0.15

Answer: A

 [Watch Video Solution](#)

87. For the synthesis of ammonia, K_c is 1.2 at 375°C , $\text{N}_2(\text{g}) + 3\text{H}_2(\text{g}) \rightleftharpoons 2\text{NH}_3(\text{g})$

What is K_p at this temperature?

A. 4.1×10^{-8}

B. 4.2×10^{-4}

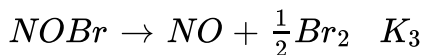
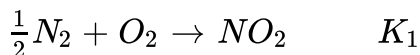
C. 1.3×10^{-3}

D. 3.4×10^3

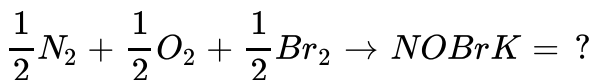
Answer: B

 [Watch Video Solution](#)

88. Consider these reactions and their corresponding K_s .



Express the K value for the reaction below in terms of K_1 , K_2 and K_3



A. $K_1 + \frac{K_2}{2} - K_3$

B. $K_1 + (K_2)^{1/2} - K_3$

C. $\frac{K_1 K_2}{2K_3}$

D. $K_1(K_2)^{1/2} / K_3$

Answer: D



Watch Video Solution

89. Which statement characterize a chemical system at equilibrium ?

(P)the rate of the forward reaction is equal to the rate of the reverse reaction

(Q)The concentrations of the reactants and products are equal.

A. P only

B. Q only

C. Both P and Q

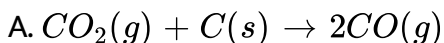
D. Neither P nor Q

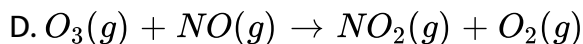
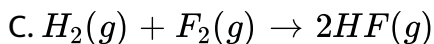
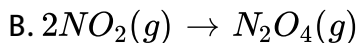
Answer: A



[Watch Video Solution](#)

90. For which reaction will K_p be larger than K_c at $25^\circ C$?





Answer: A

 [Watch Video Solution](#)

91. For the reaction , $O_2(g) + 2F_2(g) \rightarrow 2OF_2(g)$, $K_p = 4.1$

If $P_{O_2}(g) = 0.116$ atm and $P_{F_2}(g) = 0.0461$ atm at equilibrium , what is the pressure of $OF_2(g)$?

A. 0.101 atm

B. 0.032 atm

C. 0.760 atm

D. 166 atm

Answer: B



Watch Video Solution

92. For the reaction, $2HI(g) \rightarrow H_2(g) + I_2(g)$

What is the relationship between K_c and K_p at $25^\circ C$?

A. $K_c = K_p$

B. $K_c > K_p$

C. $K_c < K_p$

D. The relationship varies depending on the pressure.

Answer: A



Watch Video Solution

93. In order to prepare 25.92 gm of HBr in 20 litre container by following reactions what minimum mass of equimolar mixture of H_2 and Br_2 should be taken ?

Given : $H_2(g) + Br_2(g) \rightleftharpoons 2HBr(g)$, $K_{eq} = 64$

[H=1,Br=80]

A. 64 g

B. 32.4 g

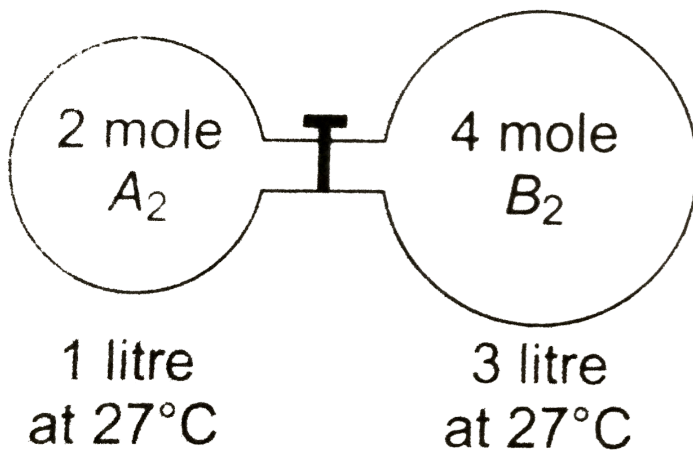
C. 80 g

D. 80.4 g

Answer: B



Watch Video Solution



94.

The gas A_2 in the left flask allowed to react with gas B_2 present in right flask as $A_2(g) + B_2(g) \rightleftharpoons 2AB(g)$, $K_c = 4$ at $27^\circ C$. What is the concentration of AB when equilibrium is established ?

- A. 1.33 M
- B. 0.66 M
- C. 0.33 M
- D. 2.66 M

Answer: D

 [Watch Video Solution](#)

Reaction Quotient

1. 2 Moles each of SO_3 , CO , SO_2 and CO_2 is taken in a one lit. vessel.

If K_C for the reaction,

$SO_3(g) + CO(g) \rightleftharpoons SO_2(g) + CO_2(g)$ is $\frac{1}{9}$ then :

A. total no of moles at equilibrium are less than 8

B. $n(SO_3) + n(CO_2) = 4$

C. $[n(SO_2) / n(CO)] < 1$

D. both (b) and (c)

Answer: D



[Watch Video Solution](#)

2. The reaction quotient Q for :

$N_2(g) + 3H_2(g) \rightleftharpoons 2NH_3(g)$ is given by $Q = \frac{[NH_3]^2}{[N_2][H_2]^3}$ The reaction

will proceed in backward direction, when :

A. $Q = K_c$

B. $Q < K_c$

C. $Q > K_c$

D. $Q=0$

Answer: C



Watch Video Solution

3. The formation constant of $Ni(NH_3)_6^{2+}$ is 6×10^8 at $25^\circ C$. If 50 ml of 2.0 M NH_3 is added to 50 ml of 0.20 M solution of Ni^{2+} , the concentration of Ni^{2+} ion will be nearly equal to :

A. $3 \times 10^{-10} \text{molelitre}^{-1}$

B. $2 \times 10^{-10} \text{molelitre}^{-1}$

C. $2 \times 10^{-9} \text{molelitre}^{-1}$

D. $4 \times 10^{-8} \text{molelitre}^{-1}$

Answer: D

 [Watch Video Solution](#)

4. A 10 litre box contains O_3 and O_2 at equilibrium at 2000 K.

$$K_p = 4 \times 10^{14} \text{ atm for } 2O_3(g) \rightleftharpoons 3O_2(g)$$

Assume that $P_{O_2} > P_{O_3}$ and if total pressure is 8 atm, then partial pressure of O_3 will be :

A. $8 \times 10^{-5} \text{ atm}$

B. $11.3 \times 10^{-7} \text{ atm}$

C. $9.71 \times 10^{-6} \text{ atm}$

D. 9.71×10^{-2} atm

Answer: B

 [Watch Video Solution](#)

5. When two reactants, A and B are mixed to give products C and D, the reaction quotient Q , at the initial stages of the reaction.

- A. is zero
- B. decreases with time
- C. is independent of time
- D. increases with time

Answer: D

 [Watch Video Solution](#)

6. For the reactions $2A(g) + 2B(g) = 3C(g)$ at a certain temperature, K is 2.5×10^{-2} . For which conditions will the reaction proceed to the right at the same temperature ?

- A. $[A], M$ $[B], M$ $[C], M$
0.10 0.10 0.10
- B. $[A], M$ $[B], M$ $[C], M$
1.0 1.0 1.0
- C. $[A], M$ $[B], M$ $[C], M$
1.0 0.10 0.10
- D. $[A], M$ $[B], M$ $[C], M$
1.0 1.0 0.10

Answer: D

 [Watch Video Solution](#)

7. Equilibrium concentration of B if initial moles of 'A', 'B' and 'C' are 8, 16 and 16 respectively in 1 litre container, is :

Given : $A(g) + 3B(g) \rightleftharpoons C(g)$ $K_C = 10^9 M^{-3}$

- A. $\left(\frac{8}{27}\right) \times 10^{-3} M$

B. $\left(\frac{2}{27}\right) \times 10^{-3}M$

C. $2 \times 10^3 M$

D. $2 \times 10^{-3}M$

Answer: D

 [Watch Video Solution](#)

8. For the reaction $A(aq) \rightleftharpoons B(aq) + 2C(aq)$ K_C at 25° is 4×10^{-19}

Concentration of B in a solution that had originally C and B concentration of 0.1 M and 0.03 M respectively is :

A. 0.03 M

B. $7.5 \times 10^{-12}M$

C. $7.5 \times 10^{-15}M$

D. $7.5 \times 10^{-18}M$

Answer: D



Watch Video Solution

9. For the reaction $2A(g) + B(g) \rightleftharpoons C(g) + D(g)$, $K_c = 10^{12}$. If initially 4, 2, 6, 2 moles of A, B, C, D respectively are taken in a 1 litre vessel, then the equilibrium concentration of A is :

A. 10^{-4}

B. 8×10^{-4}

C. 4×10^{-4}

D. 2×10^{-4}

Answer: C



Watch Video Solution

10. NO_2 is involved in the formation of smog and acid rain. A reaction that is important in the formation of NO_2 is

$O_3(g) + NO(g) \rightleftharpoons O_2(g) + NO_2(g)$, $K_c = 6 \times 10^{34}$, if the air over

KOTA

contained

$1 \times 10^{-6} MO_3$, $1 \times 10^{-5} MNO$, $2.5 \times 10^{-4} MNO_2$ and $8.2 \times 10^{-3} MO_2$

, what can we conclude ?

- A. There will be a tendency to form more NO and O_3
- B. There will be a tendency to form more NO_2 and O_2
- C. There will be a tendency to form more NO_2 and O_3
- D. There will be no tendency for change because the reaction is at equilibrium

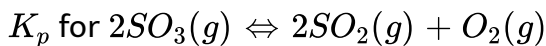
Answer: B



[Watch Video Solution](#)

Degree of Dissociation

1. The degree of dissociation of SO_3 at equilibrium pressure is α :



A. $\left[\frac{(P_0\alpha^3)}{2(1-\alpha)^3} \right]$

B. $\left[\frac{(P_0\alpha^3)}{(2+\alpha)(1-\alpha)^2} \right]$

C. $\left[\frac{(P_0\alpha^3)}{2(1-\alpha)^2} \right]$

D. None of these

Answer: B

 [Watch Video Solution](#)

2. In a container equilibrium $N_2O_4(g) \rightleftharpoons 2NO_2(g)$ is attained at $25^\circ C$

. The total equilibrium pressure in container is 380 torr. If equilibrium constant of above equilibrium is 0.667 atm, then degree of dissociation of N_2O_4 at this temperature will be:

A. $\frac{1}{3}$

B. $\frac{1}{2}$

C. $\frac{2}{3}$

D. $\frac{1}{4}$

Answer: B



[Watch Video Solution](#)

3. The degree of dissociation of PCl_5 (α) obeying the equilibrium, $PCl_5 \rightleftharpoons PCl_3 + Cl_2$, is approximately related to the pressure at equilibrium by (given $\alpha < < 1$):

A. $\alpha \propto P$

B. $\alpha \propto \frac{1}{\sqrt{P}}$

C. $\alpha \propto \frac{1}{P^2}$

D. $\alpha \propto \frac{1}{P^4}$

Answer: B

 [Watch Video Solution](#)

4. For the reaction $N_2O_4 \rightleftharpoons 2NO_2(g)$, if percentage dissociation of N_2O_4 are 20%, 45%, 65%, 80% then the sequence of observed vapour densities will be :

A. $d_{20} > d_{45} > d_{65} > d_{80}$

B. $d_{80} > d_{65} > d_{45} > d_{20}$

C. $d_{20} = d_{45} = d_{65} = d_{80}$

D. $(d_{20} = d_{45}) > (d_{65} = d_{80})$

Answer: A

 [Watch Video Solution](#)

5. $N_3 + 3H_2 \rightleftharpoons 2NH_3$ Starting with one mole of nitrogen and 3 moles of hydrogen, at equilibrium 50% of each had reacted. If the equilibrium pressure is P , the partial pressure of hydrogen at equilibrium would be

A. $\frac{P}{2}$

B. $\frac{P}{3}$

C. $\frac{P}{4}$

D. $\frac{P}{6}$

Answer: A



Watch Video Solution

6. 2.56 g of $S_8(s)$ is taken which vapourises and when equilibrium gets established between $S_8(s)$ and $S(g)$ then the vapours were found to

occupy 960 ml at 1 atm and 273 K. The fraction of $S_8(s)$ undissociated is given by :

- A. 0.4
- B. 0.6
- C. 0.54
- D. 0.46

Answer: D



Watch Video Solution

7. At temperature T , a compound $AB_2(g)$ dissociates according to the reaction $2AB_2(g) \rightleftharpoons 2AB(g) + B_2(g)$ with a degree of dissociation, x , which is small compared with unity. Deduce the expression for K_P , in terms of x and the total pressure, P .

A. $\frac{Px^3}{2}$

B. $\frac{Px^2}{3}$

C. $\frac{Px^3}{3}$

D. $\frac{Px^2}{2}$

Answer: A



Watch Video Solution

8. For a reaction,



degree of dissociation is 10% at a pressure of 2 atm and 300 K. what will be approx degree of dissociation at 0.04 atm pressure and 300 K.

A. 8 %

B. 20 %

C. 5 %

D. 10 %

Answer: B

 Watch Video Solution

9. The equilibrium constant for the decomposition of water

$H_2O(g) \rightleftharpoons H_2(g) + \frac{1}{2}O_2(g)$ is given by : (α =degree of dissociation of

$H_2O(g)$ p =Total equilibrium pressure)

$$A. K_p = \frac{\alpha^2 p^{1/2}}{(1 + \alpha)(2 - \alpha)^{1/2}}$$

$$B. K_p = \frac{\alpha^{3/2} p^{1/2}}{(1 - \alpha)(2 + \alpha)^{1/2}}$$


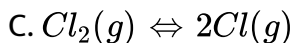
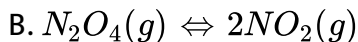
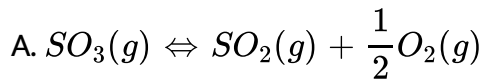
$$C. K_p = \frac{\alpha^3 p^{1/2}}{\sqrt{2}}$$

$$D. K_p = \frac{\alpha^3 p^{3/2}}{(1 - \alpha)(2 + \alpha)^{1/2}}$$

Answer: B

 Watch Video Solution

10. For which of the following reactions average molecular mass at equilibrium cannot be 60 g/mole.



Answer: D



Watch Video Solution

11. Phosphorus pentachloride dissociates as follows in a closed reaction vessel.



If total pressure at equilibrium of the reactions mixture is P and degree of dissociation of PCl_5 is x, the partial pressure of PCl_3 will be:

A. $\left(\frac{x}{x+1}\right)P$

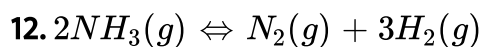
B. $\left(\frac{2x}{1-x}\right)P$

C. $\left(\frac{x}{x-1}\right)P$

D. $\left(\frac{x}{1-x}\right)P$

Answer: A

 [Watch Video Solution](#)



If degree of dissociation of ammonia at equilibrium is 0.7 then observed molecular weight of reaction mixture at equilibrium :

A. 12

B. 10

C. 15


D. 17

Answer: B



View Text Solution

13. For the given reaction at constant pressure,



Initial moles 1 0

Final moles 1 - α $\frac{\alpha}{n}$

Then the correct relation between initial density (d_i) and final density (d_f) of the system is :

A. $\left[\frac{n-1}{n} \right] \left[\frac{d_f - d_i}{d_f} \right] = \alpha$

B. $\left[\frac{n}{n-1} \right] \left[\frac{d_f - d_i}{d_f} \right] = \alpha$

C. $\left[\frac{n-1}{n} \right] \left[\frac{d_i - d_f}{d_i} \right] = \alpha$

D. $\frac{1}{(n-1)} \left[\frac{d_i - d_f}{d_i} \right] = \alpha$

Answer: B



Watch Video Solution

14. Ammonia dissociates into N_2 and H_2 such that degree of dissociation α is very less than 1 and equilibrium pressure is P_0 then the value of α is [if K_p for $2NH_3(g) \rightleftharpoons N_2(g) + 3H_2(g)$ is $27 \times 10^{-8} P_0^2$]:

A. 10^{-4}

B. 4×10^{-4}

C. 0.02

D. can't be calculated

Answer: C

 [Watch Video Solution](#)

15. In the reaction $C(s) + CO_2(g) \rightleftharpoons 2CO(g)$, the equilibrium pressure is 12 atm. If 50 % of CO_2 reacts, calculate K_p .

A. 12 atm

B. 16 atm

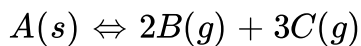
C. 20 atm

D. 24 atm

Answer: B

 [Watch Video Solution](#)

16. A solid A dissociates to give B and C gases as shown,



At equilibrium some B(g) is introduced keeping volume constant so that pressure of B of new equilibrium becomes equal to $\frac{8}{5\sqrt{2}}$ times

original total pressure calculate ratio of initial equilibrium pressure of C to that of its final pressure

A. 1:2

B. 2:1

C. $8:\sqrt{2}$

D. $\sqrt{2}:8$

Answer: D

 [Watch Video Solution](#)

17. Two moles of HI were heated in a sealed tube at $440^{\circ}C$ till the equilibrium was reached. HI was found to be 22% decomposed. The equilibrium constant for dissociation is :

A. 0.282

B. 0.0796

C. 0.0199

D. 1.99

Answer: C

 [Watch Video Solution](#)

18. In an evacuated closed isolated chamber at 250°C , 0.02 mole PCl_5 and 0.1 mole Cl_2 are mixed. ($\text{PCl}_5 \rightleftharpoons \text{PCl}_3 + \text{Cl}_2$). At equilibrium density of mixture was 2.48 g/L and pressure was 1 atm. The number of total moles of equilibrium will be approximately :

A. 0.012

B. 0.022

C. 0.039

D. 0.045

Answer: C



[Watch Video Solution](#)

19. The equilibrium constants K_{p1} and K_{p2} for the reactions $\text{X} \rightleftharpoons 2\text{Y}$ and $\text{Z} \rightleftharpoons \text{P} + \text{Q}$, respectively, are in the ratio of 1 : 9 . If the degree of dissociation at these equilibria is:

A. 1:1

B. 1:3

C. 1:9

D. 1:36

Answer: D



[Watch Video Solution](#)

20. At a certain temperature T, a compound $AB_4(g)$ dissociates as $2AB_4(g) \rightleftharpoons A_2(g) + 4B_2(g)$ with a degree of dissociation x , which is very small as compared to unity. The expression of K_p in terms of x and total equilibrium pressure p is-

A. $8P^3x^5$

B. $256P^3x^5$

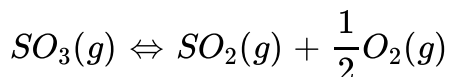
C. $4Px^2$

D. None of these

Answer: A

 **Watch Video Solution**

21. At $727^\circ C$ and 1.2atm of total equilibrium pressure, SO_3 is partially dissociated into SO_2 and O_2 as:



The density of equilibrium mixture is $0.9\text{g}/L$. The degree of dissociation is, $[Use R = 0.08\text{atmLmol}^{-1}K^{-1}]$

A. $\frac{1}{3}$

B. $\frac{2}{3}$

C. $\frac{1}{4}$

D. $\frac{1}{5}$

Answer: A

 [Watch Video Solution](#)

22. If for $2A_2B(g) \rightleftharpoons 2A_2(g) + B_2(g)$, $K_p = \text{TOTAL PRESSURE}$ (at equilibrium) and starting the dissociation from 4 mol of A_2B then:

A. degree of dissociation of A_2B will be $(2/3)$

B. total no of moles at equilibrium will be $(14/3)$

C. at equilibrium the no of moles of A_2B are not equal to the no of moles of B_2

D. at equilibrium the no of moles of A_2B are equal to the no of moles of A_2

Answer: A

 [View Text Solution](#)

23. Ammonia gas at 15 atm is introduced in a rigid vessel at 300 K. At equilibrium the total pressure of the vessel is found to be 40.11 atm at 300°C . The degree of dissociation of NH_3 will be :

A. 0.6

B. 0.4

C. unpredictable

D. None of these

Answer: B



Watch Video Solution

24. At constant temperature, the equilibrium constant K_p for by

$K_p = \frac{4x^2p}{(1-x^2)}$, where p = pressure x = extent of decomposition.

Which one of the following statement is true?

A. K_p increases with increase of P

B. K_P increases with increase of x

C. K_P increases with decrease of x

D. K_P remains constant with change in P and x

Answer: D

 [Watch Video Solution](#)

25. Consider the following equilibrium in a closed container:



At a fixed temperature, the volume of the reaction container is halved.

For this change which of the following statements holds true regarding the equilibrium constant (K_p) and the degree of dissociation (α)?

A. Neither K_P nor α changes

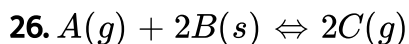
B. Both K_P and α change

C. K_P changes, but α does not change

D. K_P does not change but α changes

Answer: D

 [Watch Video Solution](#)



Initially 2 mole A (g), 4 mole of B(s) and 1 mole of an inert gas are present in a closed container. After equilibrium has established, total pressure of container becomes 9 atm. If A(g) is 50% consumed at equilibrium, then, calculate K_p for the :

A. 9 atm

B. $\frac{36}{5}$ atm

C. 12 atm

D. $\frac{2}{3}$ atm

Answer: A

 [Watch Video Solution](#)

27. Gaseous N_2O_4 dissociates into gaseous NO_2 according to the reaction $N_2O_4(g) \rightleftharpoons 2NO_2(g)$. At 300 K and 1 atm pressure, the degree of dissociation of N_2O_4 is 0.2. If one mole of N_2O_4 gas is contained in a vessel, then the density of the equilibrium mixture is :

A. 3.11 g/L

B. 6.22 g/L

C. 1.56 g/L

D. 4.56 g/L

Answer: A

 [Watch Video Solution](#)

28. NH_3 is heated at 15 at, from $25^\circ C$ to $347^\circ C$ assuming volume constant. The new pressure becomes 50 atm at equilibrium of the reaction $2NH_3 \rightleftharpoons N_2 + 3H_2$. Calculate % moles of NH_3 actually decomposed.

- A. 59 %
- B. 71 %
- C. 61.3 %
- D. 80.5 %

Answer: C

 [Watch Video Solution](#)

29. What percent of CO_2 in air is just sufficient to prevent loss in weight when $CaCO_3$ is heated at $100^\circ C$?

(Equilibrium constant K for $CaCO_3(s) \rightleftharpoons CaO(s) + CO_2(g)$ is 0.0095 atm at $100^\circ C$)

A. 0.95 %

B. 0.29 %

C. 0.05 %

D. 0.71 %

Answer: A



[Watch Video Solution](#)

30. At some temperature N_2O_4 is dissociated to 40% and 50% at total pressure P_1 and P_2 atm respectively in NO_2 . Then the ratio of P_1 and P_2 is :

A. $\frac{4}{5}$

B. $\frac{7}{4}$

C. $\frac{4}{7}$

D. None of these

Answer: B

 [Watch Video Solution](#)

31. PCl_5 decomposes as $PCl_5(g) \rightleftharpoons PCl_3(g) + Cl_2(g)$. If at equilibrium, total pressure is P and density of gaseous mixture is d at temperature T then degree of dissociation (α) is :

(Molecular wt. of $PCl_5 = M$)

A. $\alpha = 1 - \frac{PM}{dRT}$

B. $\alpha = 1 - \frac{dRT}{PM}$

C. $\alpha = \frac{PM}{dRT} - 1$

D. $\alpha = \frac{dRT}{PM} - 1$

Answer: C



Watch Video Solution

32. In an experiment carried out at 1377 K, HI was found to be 25% dissociated. The K_C for the dissociation $2HI(g) \rightleftharpoons H_2(g) + I_2(g)$ is :

A. $\frac{9}{4}$

B. 9

C. $\frac{1}{9}$

D. $\frac{1}{36}$

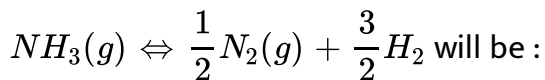
Answer: D



Watch Video Solution

33. 1 mole of nitrogen is mixed with 3 moles of hydrogen in a $\sqrt{3}$ litre container where 66.67% of nitrogen is converted into ammonia by the following reaction : $N_2(g) + 3H_2(g) \rightleftharpoons 2NH_3(g)$, Then the value of

K_C for the reaction



A. 2 M

B. $\frac{1}{2}$ M

C. 4 M

D. $\frac{1}{4}$ M

Answer: D



[Watch Video Solution](#)

34. Pure ammonia is placed in a vessel at a temperature where its dissociation constant (α) is appreciable. At equilibrium,

A. K_p does not change significantly with pressure

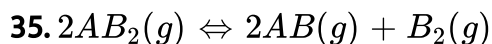
B. α does not change with pressure

C. concentration of NH_3 does not change with pressure .

D. concentration of hydrogen is less than that of nitrogen

Answer: A

 [Watch Video Solution](#)



Degree of dissociation of AB_2 is x . What will be equation for x in terms of K_p and equilibrium pressure P ?

A. $K_p = \frac{x^3}{(2+x)(1-x)^2} \times P$

B. $x = \sqrt{\frac{P}{2K_p}}$

C. $x = \sqrt{\frac{2K_p}{P}}$

D. $K_p = \frac{x^2}{(2+x)(1-x)} \times P$

Answer: A

 [Watch Video Solution](#)

36. In a gaseous reaction at equilibrium , 'n' mole of reactant 'A' decompose to give 1 mole each of C and D.It has been found that degree of dissociation of A at equilibrium is independent of total pressure.Value of 'n' is :

A. 1

B. 3

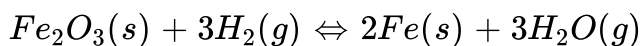
C. 0

D. 2

Answer: D

 [Watch Video Solution](#)

37. $Fe_2O_3(s)$ may be converted to Fe by reaction :




For which $K_c = 8$ at temperature 800 K. What percentage of H_2 remains unreacted at equilibrium ?

- A. 50 %
- B. 66.6 %
- C. 33.3 %
- D. 78 %

Answer: C



Watch Video Solution



When $SO_3(g)$ is added to a sealed bulb at a pressure of 2.0 atm, it undergoes the reaction above. At equilibrium, 76% of the $SO_3(g)$ has reacted. What is the value of K_p at this temperature ?

- A. 15

B. 7.6

C. 3.8

D. 2.4

Answer: B

 [Watch Video Solution](#)

39. For the reaction : $CaCO_3(s) \rightleftharpoons CaO(s) + CO_2(g)$, $K_p = 1.6$ atm at $800^\circ C$. if 20 g of $CaCO_3$ were kept in a 10 litre vessel at $800^\circ C$, the amount of $CaCO_3$ that remained at equilibrium is :

A. 34 %

B. 64 %

C. 46 %

D. None of these

Answer: D



Watch Video Solution

D.Le Chateliera principle

1. For the reaction $CO(g) + H_2O(g) \rightleftharpoons CO_2(g) + H_2(g)$ at a given temperature the equilibrium amount of $CO_2(g)$ can be increased by :

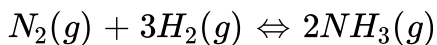
- A. adding a suitable catalyst
- B. adding an inert gas
- C. decreasing the volume of container
- D. increasing the amount of $CO(g)$

Answer: B



Watch Video Solution

2. Given the following reaction at equilibrium.



Some inert gas at constant pressure is added to the system. Predict which of the following facts will be correct ?

- A. More $NH_3(g)$ is produced
- B. Less $NH_3(g)$ is produced
- C. No effect on the equilibrium
- D. K_p of the reaction is decreased

Answer: B

 [Watch Video Solution](#)

3. For an equilibrium $H_2O(s) \rightleftharpoons H_2O(l)$ which of the following statements is true ?

- A. The pressure changes do not effect the equilibrium.

- B. More of ice melts if pressure on the system is increased.
- C. More of liquid freezes if pressure on the system is increased.
- D. The pressure changes may increase or decrease the degree of advancement of the reaction depending upon the temperature of the system.

Answer: B

 [Watch Video Solution](#)

4. When a bottle of cold drink is opened, the gas comes out with a fizzle due to:

- A. decrease in temperature
- B. increase in pressure
- C. decrease in pressure suddenly which results in decrease of solubility of CO_2 gas in water

D. none of above

Answer: C

 [Watch Video Solution](#)

5. The equilibrium , $SO_2Cl_2(g) \rightleftharpoons SO_2(g) + Cl_2(g)$ is attained at $25^\circ C$ in a closed container and an inert gas , helium , is introduced. Which of the following statement is are correct ?

- A. Concentrations of SO_2 , Cl_2 and SO_2Cl_2 are changed
- B. No effect on equilibrium
- C. Concentrations of SO_2 is reduced
- D. K_p of reaction is increasing

Answer: B

 [Watch Video Solution](#)

6. An equilibrium mixture in a vessel of capacity 100 litre contains 1 mol N_2 , 2 mol O_2 and 3 mol NO. Number of moles of O_2 to be added so that at new equilibrium the concentration of NO is found to be 0.04 mol/lit :

A. $\left(\frac{101}{18}\right)$

B. $\left(\frac{101}{9}\right)$

C. $\left(\frac{202}{9}\right)$

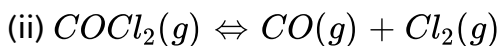
D. None of these

Answer: A



[View Text Solution](#)

7. The following two reactions:



are simultaneously in equilibrium in a container at constant volume. A few moles of $CO(g)$ are later introduced into the vessel. After some time, the new equilibrium concentration of

- A. PCl_5 will remain unchanged
- B. Cl_2 will be greater
- C. PCl_5 will become less
- D. PCl_5 will become greater

Answer: C

 [Watch Video Solution](#)

8. For the reaction, $4NH_3(g) + 5O_2(g) \rightleftharpoons 4NO(g) + 6$

$H_2O(l)$, $\Delta H =$ positive. At equilibrium the factor that will not affect the concentration of NH_3 is:

- A. change in pressure

B. change in volume

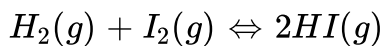
C. catalyst

D. None of these

Answer: C

 [Watch Video Solution](#)

9. For the reaction



The equilibrium constant K_p changes with

A. total pressure

B. catalyst

C. the amounts of H_2 and I_2 present

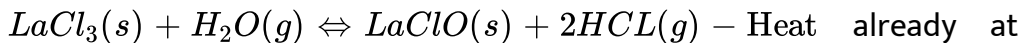
D. temperature

Answer: D



Watch Video Solution

10. To the system,



already at equilibrium, more water vapour is added without altering temperature or volume of the system. When equilibrium is re-established, the pressure of water vapour is doubled. The pressure of HCl present in the system increases by a factor of

A. 2

B. $\sqrt{2}$

C. $\sqrt{3}$

D. $\sqrt{5}$

Answer: B



Watch Video Solution

11. In the Haber process for the industrial manufacturing of ammonia involving the reaction, $N_2(g) + 3H_2(g) \rightleftharpoons 2NH_3(g)$ at 200 atm pressure in the presence of a catalyst, a temperature of about $500^\circ C$ is used. This is considered as optimum temperature for the process because :

- A. yield is maximum at this temperature
- B. catalyst is active only at this temperature
- C. energy needed for the reaction is easily obtained at this temperature .
- D. rate of the catalytic reaction is fast enough while the yield is also appreciable for this exothermic reaction at this temperature

Answer: D

 [Watch Video Solution](#)

12. For the reaction $CaCO_3(s) \rightleftharpoons CaO(s) + CO_2(g)$, the pressure of $CO_2(g)$ depends on :

- A. the mass of $CaCO_3(s)$
- B. the mass of $CaO(s)$
- C. the masses of both $CaCO_3(s)$ and $CaO(s)$
- D. temperature of the system

Answer: D

 [Watch Video Solution](#)

13. Which of the following will not shift the equilibrium, $N_2 + 3H_2 \rightleftharpoons 2NH_3$ towards product side ?

- A. Cooling
- B. Addition of reactants

C. Addition of catalyst

D. Increasing pressure

Answer: C

 [Watch Video Solution](#)

14. One mole of helium (He) gas is added to the equilibrium $N_2O_4(g) \rightleftharpoons 2NO_2(g)$ set up in cylinder fitted with piston in such a way that the piston is moved outwards to keep the total equilibrium pressure constant:

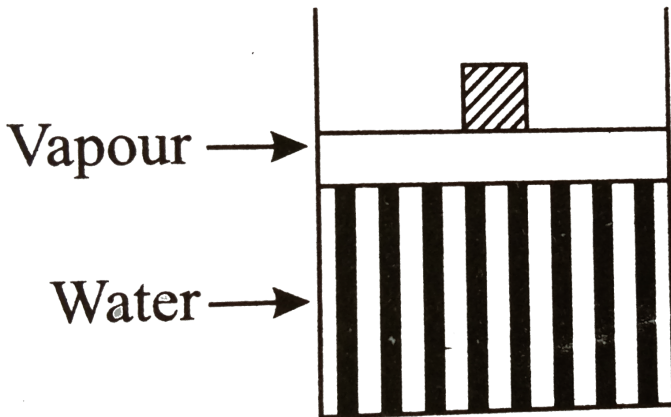
- A. The equilibrium will remains unchanged
- B. The equilibrium will shift in the forward direction
- C. The equilibrium will shift in the backward direction
- D. None of the above

Answer: B



Watch Video Solution

15. Some quantity of water is contained in a container as shown in figure. As neon is added to this system at constant pressure, the amount of liquid water in the vessel



- A. increases
- B. decreases
- C. remains same
- D. changes unpredictably

Answer: B



Watch Video Solution

16. For the equilibrium



$K_p = 2.25 \times 10^{-4} atm^2$ and vapour pressure of water is 22.8 torr at 298 K. $CuSO_4 \cdot 5H_2O(s)$ is efflorescent (i.e., losses water) when relative humidity is :

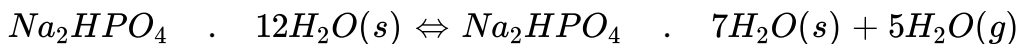
- A. less than 33.3%
- B. less than 50%
- C. less than 66.6%
- D. above 66.6 %

Answer: B



Watch Video Solution

1. Equilibrium constant for the following equilibrium is given at $1^\circ C$.



$K_p = 31.25 \times 10^{-13}$. At equilibrium what will be partial pressure of water vapour:

A. $\frac{1}{5} \times 10^{-3} \text{ atm}$

B. $0.5 \times 10^{-3} \text{ atm}$

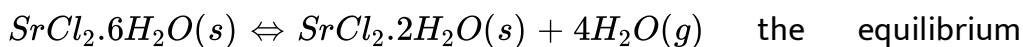
C. $5 \times 10^{-2} \text{ atm}$

D. $5 \times 10^{-3} \text{ atm}$

Answer: D

 [Watch Video Solution](#)

2. For the equilibrium,



the equilibrium constant $K_p = 16 \times 10^{-12} \text{ atm}^4$ at $1^\circ C$. If one litre of air saturated

with water vapour at 1°C is exposed to a large quantity of $\text{SrCl}_2 \cdot 2\text{H}_2\text{O}(s)$, what weight of water vapour will be absorbed?

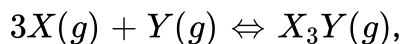
Saturated vapour pressure of water at $1^{\circ}\text{C} = 7.6$ torr.

- A. 6.4 mg
- B. 3.25 mg
- C. 2.3 mg
- D. 8.5 mg

Answer: A

 [Watch Video Solution](#)

3. For the chemical reaction



the amount of X_3Y at equilibrium is affected by

- A. temperature and pressure

B. temperature only

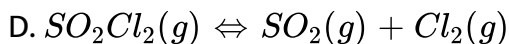
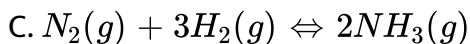
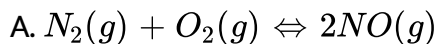
C. pressure only

D. temperature, pressure and catalyst

Answer: A

 [Watch Video Solution](#)

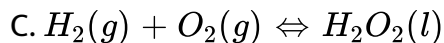
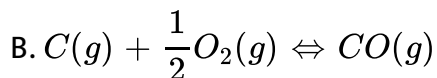
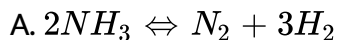
4. In which of the following equilibrium, change in the volume of the system does not alter the number of moles?



Answer: A

 [Watch Video Solution](#)

5. In which of following reactions, increase in the volume at constant temperature does not affect the number of moles of at equilibrium?



D. None of the above

Answer: D



Watch Video Solution

6. Which of the following is not favourable for SO_3 formation ?



A. High pressure

B. High temperature

C. Decreasing SO_3 concentration

D. Increasing reactant concentration

Answer: B

 [Watch Video Solution](#)

7. Consider the reaction equilibrium,
 $2SO_{2(g)} + O_{2(g)} \rightleftharpoons$, $\Delta H^\circ = -198kJ$. On the basis of Le-Chatelier's principle, the condition favourable for the forward reaction is

A. lowering of temperature as well as pressure

B. increasing temperature as well as pressure

C. lowering the temperature and increasing the pressure

D. any value of temperature and pressure

Answer: C

 [Watch Video Solution](#)

8. Introduction of inert gas (at the same temperature) will affect the equilibrium if :

A. volume is constant and $\Delta n_g \neq 0$


B. pressure is constant and $\Delta n_g \neq 0$

C. volume is constant and $\Delta n_g = 0$

D. pressure is constant and $\Delta n_g = 0$

Answer: B

 [Watch Video Solution](#)

9. Densities of diamond and graphite are $\frac{3.5g}{mL}$ and $\frac{2.3g}{mL}$. 

$$\Delta_7 H = -1.9 \frac{kJ}{mole}$$

Favourable conditions for formation of diamond are:

- A. high pressure and low temperature
- B. low pressure and high temperature
- C. high pressure and high temperature
- D. low pressure and low temperature

Answer: C

 [Watch Video Solution](#)

10. In a reversible chemical reaction having two reactants in equilibrium, if the concentration of the reactants are doubled then the equilibrium constant will :

- A. also be double

B. be halved

C. become one-fourth

D. remain the same

Answer: D

 [Watch Video Solution](#)

11. In order to increase the forward rate of the reaction: $2A + 3B \rightleftharpoons$
Product, 32 times, it is necessary to :

A. make the concentration of A and B three times

B. make the concentration of A and B two times

C. make the concentration of A and B half

D. make the concentration of A and B four times

Answer: B

 [Watch Video Solution](#)

12. For the reaction $A(g) + B(g) \rightleftharpoons C(g)$ at equilibrium the partial pressure of the species are $P_A = 0.15\text{atm}$, $P_C = P_B = 0.30\text{atm}$. If the capacity of reaction vessel is reduced, the equilibrium is re-established. In the new situation partial pressure A and B become twice. What is the partial pressure of C?

A. 0.30

B. 0.60

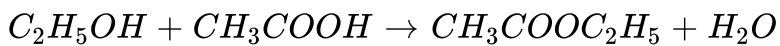
C. 1.20

D. 1.80

Answer: C

[Watch Video Solution](#)

13. On mixing 1 dm^3 of 3M ethanol with 1 dm^3 of 2 M ethanoic acid, an ester is formed.



If each solution is diluted with an equal volume of water, the decrease in the initial rate would be

- A. 4 times
- B. 2 times
- C. 0.5 times
- D. 0.25 times

Answer: D



[Watch Video Solution](#)

14. The exothermic formation of ClF_3 is represented by the equation:



Which of the following will increase the quantity of ClF_3 in an equilibrium mixture of Cl_2 , F_2 , and ClF_3 ?

- A. Adding F_2
- B. Increasing the volume of container
- C. Removing Cl_2
- D. Increasing the temperature

Answer: A



[Watch Video Solution](#)

15. When 1 mole of carbon is converted into 1 mole of CO_2 , the heat liberated is same :

- A. irrespective of whether the volume is kept constant or pressure is kept constant

- B. irrespective of the temperature at which there reaction is carried out
- C. whether the carbon is in the form of diamond or graphite
- D. whether the carbon is in gaseous state or solid state.

Answer: A

 [Watch Video Solution](#)



In given equilibrium reaction, volume of container is increased by mixing inert gas at constant temperature :

- A. equilibrium will shift in forward direction and concentration of $Cl_2(g)$ will decrease
- B. equilibrium will shift in forward direction and concentration of $Cl_2(g)$ will increase

C. equilibrium will shift in backward direction and concentration of

$Cl_2(g)$ will decrease

D. equilibrium will whift in backward direction and concentration of

$Cl_2(g)$ will increase

Answer: A

 [Watch Video Solution](#)

17. The increase of pressure on ice water system at constant temperature will lead to :

A. a shift of the equilibrium in the forward direction

B. a decrease in the entropy of the system

C. an increase in the Gibbs energy of the systed no effect on the equilibrium

D. no effect on the equilibrium

Answer: A



[Watch Video Solution](#)

18. An equilibrium mixture of $NO_2(g)$ and $N_2O_4(g)$ is present in a closed container at 300 K with pressures 0.4 atm and 0.2 atm respectively. On doubling the volume of container, the pressure of $NO_2(g)$ at new equilibrium at 300 K will be :

A. 0.19 atm

B. 0.35 atm

C. 0.2 atm

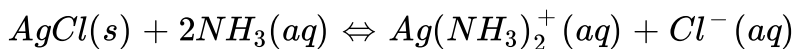
D. 0.25 atm

Answer: D



[View Text Solution](#)

19. In the equilibrium reaction,



Increase in the concentration of $Cl^-(aq)$ causes :

- A. $AgCl(s)$ to decompose
- B. $AgCl(s)$ to precipitate
- C. $Ag(NH_3)_2^+(aq)$ to form
- D. the $NH_3(aq)$ concentration to decrease

Answer: B



[View Text Solution](#)

20. In a closed system: $A(s) \rightleftharpoons 2B(g) + 3C(g)$, if the partial pressure of C is doubled at equilibrium, then partial pressure of B will be :

- A. two times the original value
- B. one-half of its original value

C. $\frac{1}{2\sqrt{2}}$ times the original value

D. $2\sqrt{2}$ times the original value

Answer: C



[View Text Solution](#)

21. For reaction, $2SO_2(g) + O_2(g) \rightleftharpoons 2SO_3(g)$ which statements are correct?

(P) $K_c = [SO_2][O_2] / [SO_3]$

(Q) Addition of $O_2(g)$ to the system at constant temperature and volume would decrease the value of K_c .

A. P only

B. Q only

C. Both P and Q

D. Neither P nor Q

Answer: D



[View Text Solution](#)

22. For the exothermic reaction :

$$4NH_3(g) + 7O_2(g) \rightleftharpoons 4NO_2(g) + 6H_2O(l)$$

Which change will increase the quantity of NO_2 in the mixture?

- A. Increasing temperature
- B. Decreasing container volume
- C. Adding Ne(g)
- D. Adding $H_2O(g)$

Answer: B



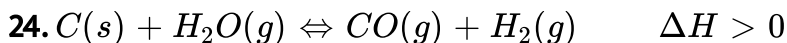
[View Text Solution](#)

23. The rate of a stoichiometric reaction between a solid and gas in a container may be increased by increasing all of the following factors EXCEPT the :

- A. pressure of the gas.
- B. temperature of the gas.
- C. volume of the container.
- D. surface area of the solid.

Answer: C

 [View Text Solution](#)



For the system above at equilibrium, which changes will increase the amount of $H_2(g)$?

(P) Adding C(s)

(Q) Increasing the volume of container

(R) Increasing the temperature

A. P only

B. R only

C. Q and R only

D. P, Q and R

Answer: C



[View Text Solution](#)

25. Consider the system at equilibrium: $2SO_2(g) + O_2(g) \rightleftharpoons 2SO_3(g)$

for which $\Delta H < 0$. Which change(S) will increase the yield of $SO_3(g)$?

(P) Increasing the temperature

(Q) Increasing the volume of the container

A. P only

B. Q only

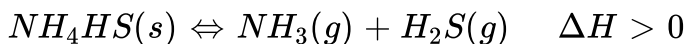
C. Both P and Q

D. Neither P nor Q

Answer: D

 [View Text Solution](#)

26. Consider the system at equilibrium:



Factors which favour the formation of more $H_2S(g)$ include which of the following?

(P) adding a small amount of $NH_4HS(s)$ at constant volume

(Q) increasing the pressure at constant temperature

(R) increasing the temperature at constant pressure

A. P only

B. R only

C. P and Q only

D. P and R only

Answer: B

 [View Text Solution](#)

27. The equilibrium system $N_2O_4(g) \rightleftharpoons 2NO_2(g)$ has $K_P = 11$ and $\Delta H = 57\text{kJ}\cdot\text{mol}^{-1}$ at 25°C . Which action will NOT cause a change in the position of the equilibrium?

A. Increasing the temperature

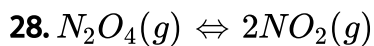
B. Adding $NO_2(g)$

C. Adding xenon gas to increase the pressure

D. Increasing the container volume

Answer: C

 [View Text Solution](#)



The equilibrium reaction shown is endothermic as written. Which change will increase the amount of NO_2 at equilibrium?

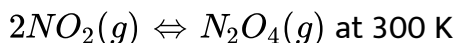
- A. Adding a catalyst
- B. Decreasing the temperature
- C. Increasing the volume of the container
- D. Adding an inert gas to increase the pressure

Answer: C



[View Text Solution](#)

29. For the reaction,



The value of K_P is 2 atm^{-1} . The total pressure at equilibrium is 10

atm. If volum of cantainer become two times of its original volume, what will be its equilibrium pressure at 300 K?

- A. 6.4 atm
- B. 4.51 atm
- C. 6.0 atm
- D. 5.19 atm

Answer: D



[View Text Solution](#)

30. $C(s) + CO_2(g) \rightleftharpoons 2CO(g)$. If this system is at equilibrium, which change(s) will alter the value of K_P ?

- (P) Raising the temperature
- (Q) Adding solid C
- (R) Decreasing the pressure

A. P only

B. Q only

C. P and Q only

D. Q and R only

Answer: A



[View Text Solution](#)



Which change(s) will increase the quantity of $SO_3(g)$ at equilibrium?

(P) Increasing the temperature.

(Q) Reducing the volume of the container.

(R) Adding He to increase the pressure keeping volume

A. P only

B. Q only

C. P and Q only


D. Q and R only

Answer: B



[View Text Solution](#)

32. For the reaction,



Which change(s) will increase the fraction of $SO_3(g)$ in the equilibrium mixture?

(P) Increasing the pressure

(Q) Increasing the temperature

(R) Adding a catalyst

A. P only

B. R only

C. P and R only

D, P, Q and R

Answer: A

 [View Text Solution](#)

33. Consider this reaction.



What conditions of temperature and pressure will produce the highest yield of NOCl at equilibrium?

- A. T P
 high high
- B. T P
 high low
- C. T P
 low high
- D. T P
 low low

Answer: C

 [View Text Solution](#)

34. The triple point of CO_2 occurs at 5.1 atm and $-56^\circ C$. Its critical temperature is $31^\circ C$. Solid CO_2 is more dense than liquid CO_2 . Under which combination of pressure and temperature is liquid CO_2 stable at equilibrium?

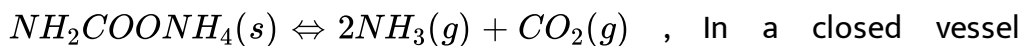
- A. 10 atm and $-25^\circ C$
- B. 5.1 atm and $-25^\circ C$
- C. 10 atm $33^\circ C$
- D. 5.1 atm and $-100^\circ C$

Answer: A



[View Text Solution](#)

35. Ammonium carbamate dissociates as :



containing ammonium carbamate, at equilibrium, CO_2 is added such that partial pressure of CO_2 now equals three times the original total pressure. Calculate the ratio of total pressure now to the original pressure :

A. $\frac{31}{27}$

B. $\frac{11}{9}$

C. $\frac{27}{31}$

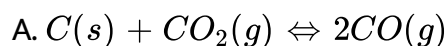
D. $\frac{29}{9}$

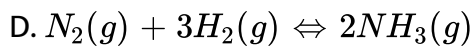
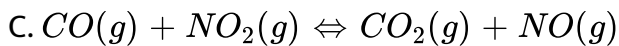
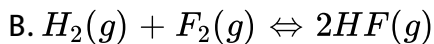
Answer: D



[View Text Solution](#)

36. In which reaction at equilibrium will the amount of reactants present increase with an increase in the container volume?





Answer: D



[View Text Solution](#)

37. For dissociation of NH_3 giving N_2 and H_2 gases, the partial pressures at equilibrium are 100,80,80 torr respectively. If some N_2 gas is removed and at new equilibrium partial pressure of H_2 becomes 128 torr then the partial pressure of N_2 remaining will be approx.

A. 9 torr

B. 71 torr

C. 8 torr

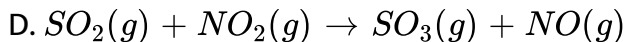
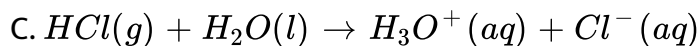
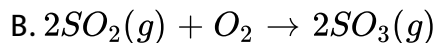
D. 72 torr

Answer: A



[View Text Solution](#)

38. For which reaction at equilibrium does a decrease in volume of the container cause a decrease in product(s), quantity at constant temperature?



Answer: A

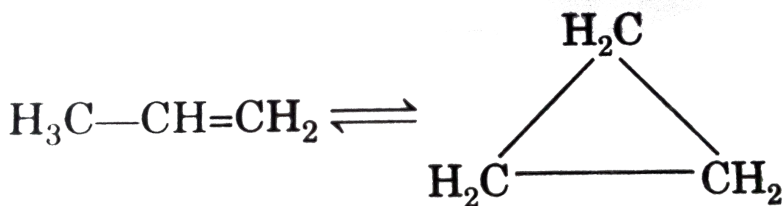
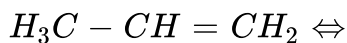


[View Text Solution](#)

39. The gas phase reaction shown is endothermic as written. Which, change(s) will increase the quantity of $CH_3CH=CH_2$ at equilibrium?

(P) Increasing the temperature

(Q) Increasing the pressure



A. P only

B. Q only

C. Both P and Q

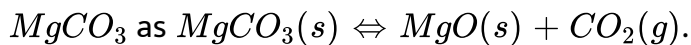
D. Neither P nor Q

Answer: D



View Text Solution

40. For the dissociation of



Identify the correct option regarding extent of dissociation of $MgCO_3$.

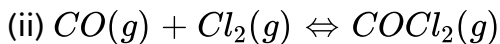
- A. As temperature is increased, extent of dissociation decreases.
- B. Extent of dissociation at equilibrium will increase if equilibrium is attained at the same temperature in a container of lesser volume.
- C. Extent of dissociation of $MgCO_3$ will increase if taken in a larger container.
- D. Extent of dissociation will remain unchanged on changing volume of the container.

Answer: C



[View Text Solution](#)

41. In a closed container two reactions take place simultaneously



On adding more CO into the container, select the correct option :

(P) Degree of dissociation of $PCl_5(g)$ decreases.

(Q) Conc. of $CO(g)$ at new equilibrium position is less than that of at initial equilibrium conc.

(R) Degree of dissociation of $PCl_5(g)$ increases.

A. Only (P)

B. Only (R)

C. Both (P) and (Q)

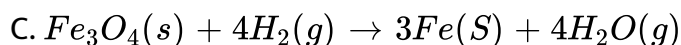
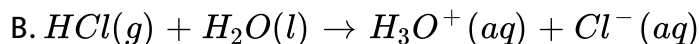
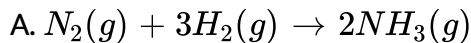
D. Both (Q) and (R)

Answer: B



[View Text Solution](#)

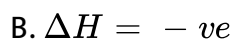
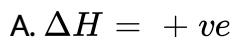
42. For which reaction at equilibrium will a decrease in volume at constant temperature cause a decrease in the amount of product?



Answer: D

 [View Text Solution](#)

43. For the reaction $H_2(g) + I_2(g) \rightleftharpoons 2HI(g)$ $K_c = 66.9$ at $350^\circ C$ and $K_c = 50.0$ at $448^\circ C$. The reaction has



C. $\Delta H = \text{zero}$

D. ΔH sign can not be determined

Answer: B

 [Watch Video Solution](#)

44. Equilibrium constant (K_p) for $2H_2S_{(g)} \rightleftharpoons 2H_{2(g)} + S_{2(g)}$ is 0.0118 atm at $1065^\circ C$ and heat of dissociation is 42.4 kcal . Find equilibrium constant at $1132^\circ C$.

A. 1.180×10^4

B. 11.8

C. 118

D. cannot be calculated from given data

Answer: A

 [Watch Video Solution](#)

45. The effect of temperature on equilibrium constant is expressed

as,

$$\log \left[\frac{K_2}{K_1} \right] = \frac{-\Delta H}{2.303} \left[\frac{1}{T_2} - \frac{1}{T_1} \right], (T_2 > T_1)$$

For endothermic reaction false statement is :

(d) $K_2 K_1$.

A. $(T_2 > T_1) = \text{positive}$

B. $\Delta H = \text{positive}$

C. $\log K_2 > \log K_1$

D. $K_2 K_1$.

Answer: A



[View Text Solution](#)

46. If low pressure and low temperature are the favourable conditions for the reaction:



then the true statements will be :

A. $(a+b) < (c+d)$ and $\Delta H = +X$

B. $(a+b) > (c+d)$ and $\Delta H = +X$

C. $(a+b) < (c+d)$ and $\Delta H = -X$

D. no relation between Δ and K_{eq}

Answer: C



[View Text Solution](#)

47. At room temperature, the equilibrium constant for the reaction $P + Q \rightleftharpoons R + S$ was calculated to be 4.32. At $425^\circ C$ the equilibrium constant became 1.24×10^{-2} . This indicates that the reaction

- A. is exothermic
- B. is endothermic
- C. is difficult to predict
- D. no reaction between Δ and K

Answer: A

 [Watch Video Solution](#)



Which is correct statement if N_2 is added at equilibrium condition?

- A. If N_2 is added at equilibrium condition, the because according to $I \in d$ law of thermodynamics the entrophy must increase in the direction of spontaneous reaction.
- B. The condition for equilibrium is $2\Delta G_{NH_3} = 3\Delta G_{H_2} + \Delta G_{N_2}$ where G is Gibbs free energy per mole of the gaseous species

measured at that partial pressure.

C. Addition of catalyst does not change K_P but changes ΔH

D. At 400K addition of catalyst will increase forward reaction by 2 times while reverse reaction rate will be changed by 1.7 times.

Answer: B

 [Watch Video Solution](#)

49. The value of $\log_{10} K$ for a reaction $A \rightleftharpoons B$ is (Given:

$$\Delta_f H_{298K}^\ominus = -54.07 \text{ kJ mol}^{-1},$$

$$\Delta_r S_{298K}^\ominus = 10 \text{ JK}^{-1} \text{ mol}^{-1}, \text{ and } R = 8.314 \text{ JK}^{-1} \text{ mol}^{-1}$$

A. 5

B. 10

C. 95

D. 100

Answer: B

 [Watch Video Solution](#)

50. The correct relationship between free energy change in a reaction and the corresponding equilibrium constant K is :

A. $-\Delta G^\circ = RT \ln K$

B. $\Delta G = RT \ln K$

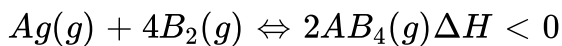
C. $-\Delta G = RT \ln K$

D. $-\Delta G^\circ = RT \ln K$

Answer: A

 [View Text Solution](#)

51. For the following reaction, formation of the products is favoured by :



- A. low temperature and high pressure
- B. high temperature and low pressure
- C. low temperature and low pressure
- D. high temperature and high pressure

Answer: A



[View Text Solution](#)

52. For a reaction $A(g) \rightleftharpoons B(g)$ at equilibrium, the partial pressure of B is found to be one fourth of the partial pressure of A. The value of ΔG° of the reaction $A \rightleftharpoons B$ is :

- A. $RT \ln 4$

B. $-RT \ln 4$

C. $RT \log 4$

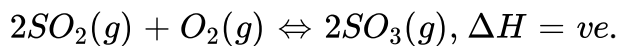
D. $-RT \log 4$

Answer: A



View Text Solution

53. For the reaction :



An increase in temperature shows:

A. more dissociation of SO_3 and a decreases in K_c

B. less dissociation of SO_3 and an increases in K_c

C. more dissociation of SO_3 and an increase in K_c

D. less dissociation of SO_3 and a decrease in K_c

Answer: A



[View Text Solution](#)

54. As ΔG° for a reaction changes from a large negative value to a large positive value, K for the reaction will change from :

- A. a large positive value to a large negative value.
- B. a large positive value to a small positive value.
- C. a large negative value to a large positive value.
- D. a large negative value to a small negative value.

Answer: B



[View Text Solution](#)

55. For a reaction at $25^\circ C$, $\Delta G = 12.7 kJ$ when the reaction quotient $Q=10.0$. What is the value of ΔG° for this reaction?

A. -12.1kJ

B. 7.0kJ

C. 18.4kJ

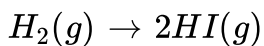
D. 37.5kJ

Answer: B



[View Text Solution](#)

56. For the reaction,



$K_2 = 50.0$ at 721K . What is the value of Δ° for this reaction (per mole of H_2) at 721K ?

A. -32.3kJ

B. -23.5kJ

C. -10.2kJ

D. -0.231kJ

Answer: B



[View Text Solution](#)

57. Which range includes the value of the equilibrium constant, K_{eq} , for a system with $\Delta G^\circ < 0$?

A. $-1 < K_{eq} < 0$

B. $0 < K_{eq} < 1$

C. $K_{eq} < -1$

D. $1 < K_{eq}$

Answer: D



[View Text Solution](#)

58. For the hypothetical reaction : $A + B \rightleftharpoons C + D$, the equilibrium constant, K , is less than 1.0 at $25^\circ C$ and decreased by 35% on changing the temperature to $45^\circ C$. What must be true according to this information?

- A. The ΔH° for the reaction is negative .
- B. The ΔS° for the reaction is positive.
- C. The ΔG° for the reaction at $25^\circ C$ is negative.
- D. The ΔG° for the reaction at $45^\circ C$ is zero.

Answer: A



[View Text Solution](#)

59. An endothermic reaction has a positive value for ΔS° . Which of the following is true about the equilibrium constant for this reaction?

- A. It may be greater than 1 only at low temperatures.

B. It may be greater than 1 only at high temperatures.

C. It is greater than 1 at all temperatures.

D. It is less than 1 at all temperatures.

Answer: B



[View Text Solution](#)

60. Hydrolysis of phosphodiester groups is the back bone of DNA, has $\Delta G^\circ = -5.5 \text{ kcal/mol}$ at 27°C . Approximate equilibrium constant for the hydrolysis reaction is :

A. 10^9

B. 10^4

C. 10

D. 10^{10}

Answer: B



[View Text Solution](#)



$$\Delta G_f^\circ [PCl_5(g)] = -74 \text{ kcal/mol}$$

$$\Delta G_f^\circ [PCl_3(g)] = -60 \text{ kcal/mol}$$

The, calculate value of equilibrium constant for dissociation of $PCl_5(g)$ at $727^\circ C$ temperature.

($\ln 2 = 0.7$)

A. 2^{10}

B. 2^{-10}

C. 2^{-20}

D. 2^{+20}

Answer: B



[View Text Solution](#)

62. What is correct about the signs and magnitudes of the free energy, ΔG° and the equilibrium constant, K , for a thermodynamically spontaneous reaction under standard conditions?

A. $\Delta G^\circ < 0, K < 0$

B. $\Delta G^\circ = 0, K > 0$

C. $\Delta G^\circ < 0, K = 0$

D. $\Delta G^\circ < 0, K > 0$

Answer: D



[View Text Solution](#)

63. For the reaction, $ADP + \text{phosphate} \rightleftharpoons ATP$, $\Delta G^\circ = 30.50 \text{ kJ mol}^{-1}$. What is the value of an equilibrium constant, K for this process under physiological conditions of 37.5°C ?

A. 4.5×10^{-6}

B. 7.4×10^{-6}

C. 1.3×10^5

D. 2.2×10^5

Answer: B

 [View Text Solution](#)

64. The two equilibrium $AB \rightleftharpoons A^+ + B^-$ and $AB + B^- \rightleftharpoons AB_2^-$ are simultaneously maintained in a solution with equilibrium, constant K_1 and K_2 respectively, The ratio of A^+ to AB_2^- in the solution is:

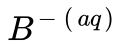
A. directly proportional to the concentration of $B^- (aq)$

B. inversely proportional to the concentration of $B^- (aq)$

C. directly proportional to the square of the concentration of

$B^- (aq)$

D. inversely proportional to the square of the concentration of



Answer: D

 [Watch Video Solution](#)

65. In the preceding problem, if $[A^+]$ and $[AB_2^-]$ are y and x respectively under equilibrium produced by adding the substance AB to the solvents than K_1 / K_2 is equal to :

A. $\frac{y}{x}(y - x)^2$

B. $\frac{(y)^2(x + y)}{x}$

C. $\frac{y^2(x + y)^2}{x}$

D. $\frac{y}{x}(x - y)$

Answer: A

 [View Text Solution](#)

66. For the following mechanism, $P + Q \xrightleftharpoons[K_B]{K_A} PQ$

$\xrightleftharpoons[K_D]{K_C} R$ at equilibrium $\frac{[R]}{[P][Q]}$ is: [K represents rate constant]

A. $\frac{K_A \cdot K_B}{K_C \cdot K_D}$

B. $\frac{K_A \cdot K_D}{K_B \cdot K_C}$

C. $\frac{K_B \cdot K_D}{K_A \cdot K_C}$

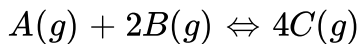
D. $\frac{K_A \cdot K_C}{K_B \cdot K_D}$

Answer: D




Watch Video Solution

67. Using given information in question provided calculate equilibrium constant of required reaction. Calculate equilibrium constant of required reaction.

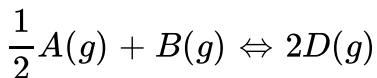


$$K_{P_1} = X$$



$$K_{P_2} = Y$$

Value of K_p for reaction



A. $\sqrt{Y} \times X^2$

B. $\frac{\sqrt{X}}{Y^2}$

C. $\sqrt{X} \times Y^2$

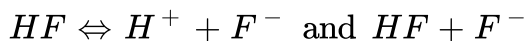
D. $\frac{\sqrt{Y}}{X^2}$

Answer: C



[View Text Solution](#)

68. The equilibrium constant values for,



are respectively $7 \times 10^{-4} \text{ mol lit}^{-1}$ and 0.2 mol lit^{-1} .

The equilibrium constant values for

(P) $2HF \rightleftharpoons H^+ + HF_2^-$ and

(Q) $HF_2^- \rightleftharpoons H^+ + 2F^-$ respectively are:

A. 3.5×10^{-4} and 1.4×10^{-3}

B. 3.5×10^{-4} and 1.4×10^{-4}

C. 3.5×10^{-3} and 1.4×10^{-3}

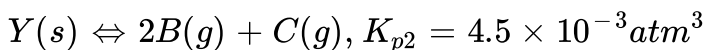
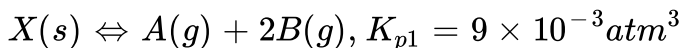
D. 3.5×10^{-3} and 1.4×10^{-4}

Answer: D



[View Text Solution](#)

69. Two solid compounds X and Y dissociates at a certain temperature as follows



The total pressure of gases over a mixture of X and Y is :

A. 4.5atm

B. 0.45atm

C. 0.6atm

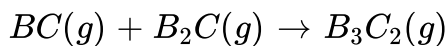
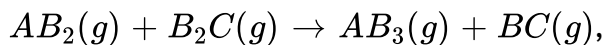
D. none of these

Answer: B



Watch Video Solution

70. If two gases AB_2 and B_2C are mixed, following equilibria are readily established:



If the reaction is started only with AB_2 with B_2C , then which of the following is necessarily true at equilibrium?

A. $[AB_3]_{eq} = [BC]_{eq}$

B. $[AB_2]_{eq} = [B_2C]_{eq}$

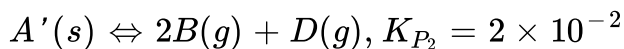
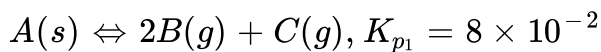
$$C. [AB_3]_{eq} > [B_3C_2]_{eq}$$

$$D. [AB_3]_{eq} < [BC]_{eq}$$

Answer: C

 **Watch Video Solution**

71. For given two equilibria attained in a container which are correct if degree of dissociation of A and A' are α and α' .



$$A. \frac{K_{P_2}}{K_{P_1}} = \left(\frac{3\alpha' + 2\alpha}{3\alpha' + 2\alpha} \right)^3 \frac{\alpha}{\alpha'}$$

$$B. \frac{P'_C}{P'_D} = 4$$

$$C. P'_B = P'_C + P'_D$$

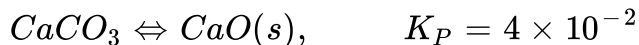
$$D. \alpha < \alpha'$$

Answer: B



Watch Video Solution

72. At 1000K, solid carbon, CaO and $CaCO_3$ are mixed and allowed to attain following equilibrium :



What is the pressure of CO at equilibrium (in atm)?

A. 0.04 atm

B. $5\sqrt{2}$

C. 50 atm

D. $\frac{\sqrt{2}}{5} \text{ atm}$

Answer: D



View Text Solution

73. statement-1 : A reaction with $K_P = \frac{1}{1.005} atm^2$ is expected to be spontaneous at standard conditions.

statement-2: Reactions with negative Δ° will be spontaneous at standard condition.

- A. Statement-1 is True, Statement-2 is True, Statement-2 is a correct explanation for Statement-1.
- B. Statement-1 is True, Statement-2 is True, Statement-2 is not a correct explanation for Statement-1.
- C. Statement-1 is True, Statement-2 is False
- D. Statement-1 is False, Statement-2 is True.

Answer: A



[View Text Solution](#)

74. statement-1 : In dilute aqueous solution, water is present in such large excess such that its concentration remains essentially constant during any reaction involving water.

statement-2 : The term $[H_2O]$ does not appear in any equilibrium constant expression for a reaction taking place in dilute aqueous solution.

A. Statement-1 is True, Statement-2 is True, Statement-2 is a correct explanation for Statement-1.

B. Statement-1 is True, Statement-2 is True, Statement-2 is not a correct explanation for Statement-1.

C. Statement-1 is True, Statement-2 is False

D. Statement-1 is False, Statement-2 is True.

Answer: B



[View Text Solution](#)

75. statement-1 : A net reaction can occur only if a system is not a equilibrium .

statement-2 : All reversible reactions occur to reach a state of equilibrium.

A. Statement-1 is True, Statement-2 is True, Statement-2 is a correct explanation for Statement-1.

B. Statement-1 is True, Statment-2is True ,Statement-2is not a correct explanation for Statement-1.

C. Statement-1 is True, Statement-2 is False

D. Statement-1 is False, Statement-2 is True.

Answer: A



[View Text Solution](#)

76. statement-1 : No term in the concentration of a pure solid or a pure liquid appears in an equilibrium constant expression.

statement-2 : Each pure solid or pure liquid is in a phase by itself, and has a constant concentration at constant temperature.

A. Statement-1 is True, Statement-2 is True, Statement-2 is a correct explanation for Statement-1.

B. Statement-1 is True, Statement-2 is True, Statement-2 is not a correct explanation for Statement-1.

C. Statement-1 is True, Statement-2 is False

D. Statement-1 is False, Statement-2 is True.

Answer: A



[View Text Solution](#)

77. statement-1 : The reaction quotient, Q has the same form as the equilibrium constant K_{eq} , and is evaluated using any given concentration of the species involved in the reaction, and not necessarily equilibrium concentrations.

statement-2 : If the numerical value of Q is not the same as the value of equilibrium constant, a reaction will occur.

A. Statement-1 is True, Statement-2 is True, Statement-2 is a correct explanation for Statement-1.

B. Statement-1 is True, Statement-2 is True, Statement-2 is not a correct explanation for Statement-1.

C. Statement-1 is True, Statement-2 is False

D. Statement-1 is False, Statement-2 is True.

Answer: B



[View Text Solution](#)

78. statement-1 : If the equation for a reaction is reversed, the equilibrium constant is inverted and if the equation is multiplied by 2, the equilibrium constant is squared.

statement-2 : The numerical value of an equilibrium constant depends on the way the equation for the reactions is written.

A. Statement-1 is True, Statement-2 is True, Statement-2 is a correct explanation for Statement-1.

B. Statement-1 is True, Statement-2 is True, Statement-2 is not a correct explanation for Statement-1.

C. Statement-1 is True, Statement-2 is False

D. Statement-1 is False, Statement-2 is True.

Answer: A



[View Text Solution](#)

79. statement-1 : The dissociation of $CaCO_3$ can be represented as, $CaCO_3(s) \rightleftharpoons CaO(s) + CO_2(g)$. Some solid $CaCO_3$ is placed in an evacuated vessel enclosed by a piston and heated so that a portion of it decomposes. If the piston is moved so that the volume of the vessel is doubled, while the temperature is held constant, the number moles of CO_2 in the vessel increase.

statement-2 : The pressure of CO_2 in the vessel will remain the same.

- A. Statement-1 is True, Statement-2 is True, Statement-2 is a correct explanation for Statement-1.
- B. Statement-1 is True, Statement-2 is True, Statement-2 is not a correct explanation for Statement-1.
- C. Statement-1 is True, Statement-2 is False
- D. Statement-1 is False, Statement-2 is True.

Answer: A



[View Text Solution](#)

80. statement-1 : A catalyst does not influence the values of equilibrium constant. statement-2 : Catalyst influence the rate of both forward and backward reactions equality.

A. Statement-1 is True, Statement-2 is True, Statement-2 is a correct explanation for Statement-1.

B. Statement-1 is True, Statment-2is True ,Statement-2is not a correct explanation for Statement-1.

C. Statement-1 is True, Statement-2 is False

D. Statement-1 is False, Statement-2 is True.

Answer: A



[View Text Solution](#)

81. statement-1 : For $PCI_5(g) \rightleftharpoons PCI_3(g) + CI_2(g)$. If more CI_2 is added the equilibrium will shift in backward direction,hence, equilibrium constant will decrease. statement-2 : Addition of inert gas to the equilibrium mixture at constant volume,does not alter the equilibrium.

A. Statement-1 is True, Statement-2 is True, Statement-2 is a correct explanation for Statement-1.

B. Statement-1 is True, Statment-2is True ,Statement-2is not a correct explanation for Statement-1.

C. Statement-1 is True, Statement-2 is False

D. Statement-1 is False, Statement-2 is True.

Answer: D



[View Text Solution](#)

82. statement-1 : For every chemical reaction at equilibrium standard Gibbs energy of reaction is zero.

statement-2 : At constant temperature and pressure, chemical reactions are spontaneous in the direction of decreasing Gibbs energy.

A. Statement-1 is True, Statement-2 is True, Statement-2 is a correct explanation for Statement-1.

B. Statement-1 is True, Statment-2is True ,Statement-2is not a correct explanation for Statement-1.

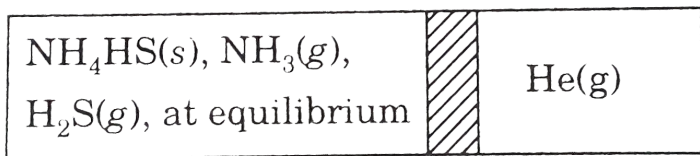
C. Statement-1 is True, Statement-2 is False

D. Statement-1 is False, Statement-2 is True.

Answer: D



View Text Solution



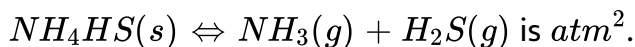
83. Only He gas can cross it (Fixed SPM)

Information : The entire system is at equilibrium at 300 K. The volume of each chamber is 82.1 L.

Total pressure in left chamber is 4 atm and in right chamber is 2 atm.

$\text{NH}_3(g)$ and $\text{H}_2\text{S}(g)$ are obtained only from dissociation of $\text{NH}_4\text{HS}(s)$. Based on this information select the correct option :

statement-1 : The K_P value for the reaction:



statement- 2 : The partial pressure of He gas in the left chamber is 1 atm.

A. Statement-1 is True, Statement-2 is True, Statement-2 is a correct explanation for Statement-1.

- B. Statement-1 is True, Statement-2 is True, Statement-2 is not a correct explanation for Statement-1.
- C. Statement-1 is True, Statement-2 is False
- D. Statement-1 is False, Statement-2 is True.

Answer: C

 [View Text Solution](#)

84. statement-1 : For the reaction $H_2(g) + I_2(g) \rightleftharpoons 2HI(g)$ if the volume of vessel is reduced to half of its original volume, equilibrium concentration of all gases will be doubled.

statement-2 : According to Le chatelier's principle, reaction shifts in a direction that tends to minimize the effect of the stress.

- A. Statement-1 is True, Statement-2 is True, Statement-2 is a correct explanation for Statement-1.

- B. Statement-1 is True, Statement-2 is True, Statement-2 is not a correct explanation for Statement-1.
- C. Statement-1 is True, Statement-2 is False
- D. Statement-1 is False, Statement-2 is True.

Answer: B

 [View Text Solution](#)

85. statement-1 : Consider a reaction



the equilibrium moles of A and B are respectively α and β in 1 litre container. If 5 moles of 'A' and 3 moles of 'B' are added then reaction must move in forward direction. statement-2: If amount of reactant added to a system at equilibrium is more than amount of product added at same time then reaction can move in any direction.

- A. Statement-1 is True, Statement-2 is True, Statement-2 is a correct explanation for Statement-1.
- B. Statement-1 is True, Statement-2 is True, Statement-2 is not a correct explanation for Statement-1.
- C. Statement-1 is True, Statement-2 is False
- D. Statement-1 is False, Statement-2 is True.

Answer: D



[View Text Solution](#)

86. statement-1 : Total number of moles in a closed system at new equilibrium is less than the old equilibrium if some amount of a substance is removed from a system [consider a reaction $A(g) \rightleftharpoons B(g)$ at equilibrium. statement-2: The number of moles of the substance which if removed, is partially compensated as the system reached to new equilibrium.

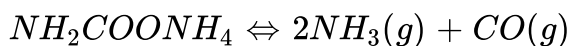
- A. Statement-1 is True, Statement-2 is True, Statement-2 is a correct explanation for Statement-1.
- B. Statement-1 is True, Statement-2 is True, Statement-2 is not a correct explanation for Statement-1.
- C. Statement-1 is True, Statement-2 is False
- D. Statement-1 is False, Statement-2 is True.

Answer: B



[View Text Solution](#)

87. statement-1 : Ammonia at a pressure of 10 atm and CO_2 at a pressure of 20 atm are introduced into an evacuated chamber. If K_P for the reaction.



is 2020 atm^3 the total pressure after a long time is less than 30 atm.

statement-2 : Equilibrium can be attained from both directions.

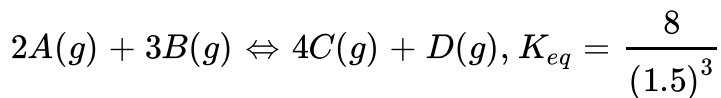
- A. Statement-1 is True, Statement-2 is True, Statement-2 is a correct explanation for Statement-1.
- B. Statement-1 is True, Statement-2 is True, Statement-2 is not a correct explanation for Statement-1.
- C. Statement-1 is True, Statement-2 is False
- D. Statement-1 is False, Statement-2 is True.

Answer: D



[View Text Solution](#)

88. For a homogeneous gaseous reaction,



If in a 2 litre rigid container starting with 4 moles of A and 6 moles of B equilibrium was established then identify the options which is/are correct.

A. Concentration of B at equilibrium is 1.5M.

B. Concentration of D at equilibrium is 1M.

C. Concentration of A at equilibrium is 1M.

D. Concentration of C at equilibrium is 2 M.

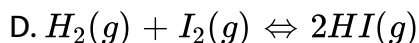
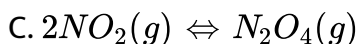
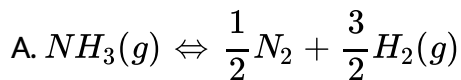
Answer: A::C::D



[View Text Solution](#)

89. If $\frac{K_c}{K_p} - \log \frac{1}{RT} = 0$

then above is true for the following equilibrium reaction :



Answer: A::B



[View Text Solution](#)

90. For a reversible reaction $\alpha A + \beta B \rightleftharpoons cC + dD$, the variation of

K with temperature is given by $\log \frac{K_2}{K_1} = \frac{-\Delta H^\circ}{2.303R} \left[\frac{1}{T_2} - \frac{1}{T_1} \right]$ then,

A. $K_2 > K_1$ if $T_2 > T_1$ for an endothermic change

B. $K_2 < K_1$ if $T_2 > T_1$ for an endothermic change

C. $K_2 > K_1$ if $T_2 > T_1$ for an endothermic change

D. $K_2 < K_1$ if $T_2 > T_1$ for an endothermic change

Answer: A::D



[View Text Solution](#)

91. For the reaction: $PCl_5(g) \rightleftharpoons PCl_3(g) + Cl_2(g)$ The forward reaction at constant temperature is favoured by:

- A. introducing chlorine gas at constant volume
- B. introducing an inert gas at constant pressure
- C. increasing the volume of the container
- D. introducing PCl_5 at constant volume

Answer: B::C::D

 [View Text Solution](#)

92. $2CaSO_4(s) \rightleftharpoons 2CaO(s) + 2SO_2(g) + O_2(g), \Delta H > 0$

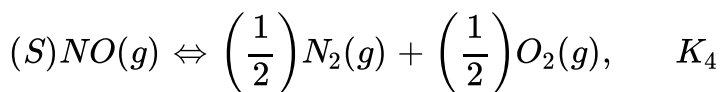
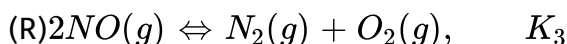
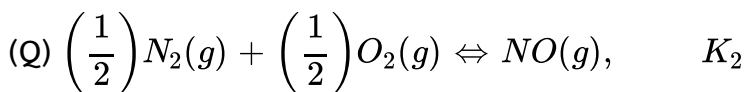
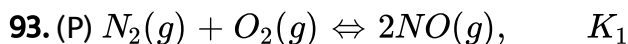
Above equilibrium is established by taking some amount of $CaSO_4(s)$ in a closed container at 1600K. Then which of the following may be correct option?

- A. Moles of $CaSO(s)$ will increase with increase in temperature.

- B. If the volume of the container is doubled at equilibrium then partial pressure of $SO_2(g)$ will change at new equilibrium
- C. If the volume of the container is halved pressure of $O_2(g)$ at new equilibrium will remain same.
- D. If two moles of the He gas is added at constant pressure then the moles of $CaO(s)$ will increase.

Answer: A::C::D

 [View Text Solution](#)



Correct relation between K_1, K_2, K_3 and K_4 is / are:

A. $K_1 K_3 = 1$

B. $\sqrt{K_1} \times K_4 = 1$

C. $\sqrt{K_3} \times K_2 = 1$

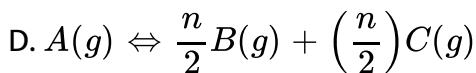
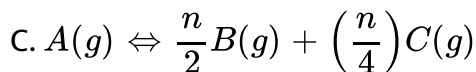
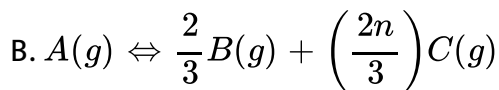
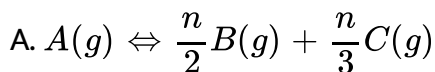
D. $K_1 \times K_2 \times K_3 = K_4$

Answer: A::B::C



View Text Solution

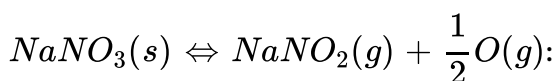
94. The equation $\alpha = \frac{D - d}{(n - 1)d}$ is correctly matched for :



Answer: B::D

[View Text Solution](#)

95. When $NaNO_3$ is heated in a closed vessel, oxygen is liberated and $NaNO_2$ is behind. At equilibrium,



- A. addition of $NaNO_2$ favours reverse reaction
- B. addition of $NaNO_3$ favours forward reaction
- C. increasing temperature favours forward reaction
- D. increasing pressure favours reverse reaction

Answer: C::D

[View Text Solution](#)

96. 1 mole each of $H_2(g)$ and $I_2(g)$ are introduced in a 1L evacuated vessel at 523 K and equilibrium $H_2(g) + I_2(g) \rightleftharpoons 2HI(g)$ is established. The concentration of $HI(g)$ at equilibrium:

A. changes on changing pressure.

B. change on changing temperature.

C. is same even if only 2 mol of HI(g) were introduced in the vessel in the beginning.

D. is same even when a platinum gauze is introduced to catalyse the reaction.

Answer: A::B::C::D



[View Text Solution](#)

97. The dissociation of phosgene, which occurs according to the reaction,



is an endothermic process. Which of the following will increase the degree of dissociation of COCl_2 ?

- A. Adding CI_2 to the system
- B. Adding helium to the system at constant pressure
- C. Decreasing the temperature of the system
- D. Reducing the total pressure

Answer: B::D



[View Text Solution](#)

98. The equilibrium of which of the following reactions will not be disturbed by the addition of an inert gas at constant volume?

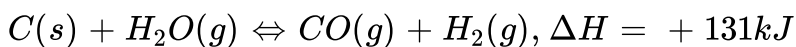
- A. $H_2(g) + I_2(g) \rightleftharpoons 2HI(g)$
- B. $N_2O_4(g) \rightleftharpoons 2NO_2(g)$
- C. $CO(g) + 2H_2(g) \rightleftharpoons CH_3OH(g)$
- D. $C(g) + H_2O(g) \rightleftharpoons CO(g) + H_2(g)$

Answer: A::B::C::D



[View Text Solution](#)

99. An industrial fuel 'water gas', which consists of a mixture of H_2 and CO can be made by passing steam over red-hot carbon. The reaction is :



The yield of CO and H_2 at a equilibrium would be shifted to the products side by :

- A. raising the relative pressure of the steam
- B. adding hot carbon without increasing temperature
- C. raising the temperature
- D. reducing the volume of the system

Answer: A::C



[View Text Solution](#)

100. For the equilibrium,



the equilibrium concentration of SO_3 will be affected by

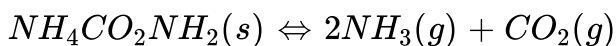
- A. doubling the volume of the reaction vessel
- B. increasing the temperature at constant volume
- C. adding more oxygen to the reaction vessel
- D. adding helium to the reaction vessel at constant volume.

Answer: A::B::C



[View Text Solution](#)

101. The dissociation of ammonium carbamate may be represented by the equation,



ΔH° for the forward reaction is negative, The equilibrium will shift from right to left if there is :

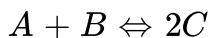
- A. a decrease in pressure
- B. an increase in temperature
- C. an increase in the concentration of ammonia
- D. an increase in the concentration of carbon dioxide

Answer: B::C::D



[View Text Solution](#)

102. For the reaction,



$K_C = 1$. If the initial concentration of A, B and C are 1m, 1m and 2m respectively then, at equilibrium.

A. $[A] = [B] = [C]$

B. $[A] = \frac{4}{3}M$

C. $[B] = \frac{2}{3}M$

D. $[A] = \frac{1}{2}[C]$

Answer: A::B



[View Text Solution](#)

103. Choose incorrect option(s) for the given reaction:

A. $A(s) + B(g) \rightleftharpoons C(g)$: At equilibrium, if pressure is increased, no effect on equilibrium.

B. $X(g) \rightleftharpoons Y(g) + Z(g)$, If total pressure of the system is decreased at equilibrium, it will shift in forward direction.

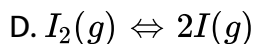
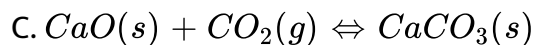
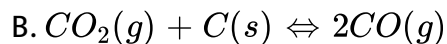
C. $H_2O(g) + CO(g) \rightleftharpoons H_2(g) + CO(g)$, inert gas is added at constant volume at equilibrium, so total pressure will increase and no effect on equilibrium.

D. $H_2O(g) + CO(g) \rightleftharpoons H_2(g) + CO(g)$, inert gas is added at constant volume at equilibrium, so total pressure will increase and no effect on equilibrium.

Answer: A::D

 [View Text Solution](#)

104. The reaction for which $K_C < K_P$ at a given temperature (gt 50 k) is/are:



Answer: A::B::D

 [View Text Solution](#)

105. Select correct statements:

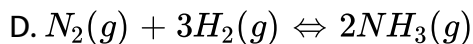
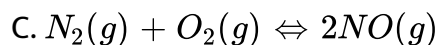
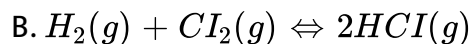
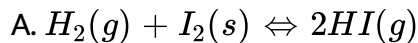
- A. Low pressure is favourable for evaporation of $H_2O(l)$.
- B. The degree of dissociation of $CaCO_3(s)$ decreases with increase in pressure.
- C. If the equilibrium constant of $A_2(g) + B_2(s) \rightleftharpoons 2AB(g)$ is 25, then equilibrium constant for $AB(g) \rightleftharpoons \frac{1}{2}A_2(g) + \frac{1}{2}B_2(g)$ is 0.2.
- D. If solid product is added to an equilibrium mixture, then equilibrium will be unaffected.

Answer: A::B::C::D



[View Text Solution](#)

106. Which among the following equilibrium, K_P does not depend upon the initial pressure of reactants?



Answer: A::B::C::D



[View Text Solution](#)

107. Which statement about the triple point of a substance is/are incorrect?

A. The triple point for a substance varies with pressure

B. The three phases (solid, liquid, gas) have same density

C. The three phases (solid, liquid, gas) are in equilibrium

D. The three phases (solid, liquid, gas) are indistinguishable in appearance.

Answer: A::B::D

 [View Text Solution](#)

108. Which of the following is/are correct about chemical equilibrium?

A. Equilibrium conditions is most stable condition under given conditions

B. Equilibrium can be achieved from both reactants as well as products side

C. Catalyst does not affect the equilibrium constant and equilibrium composition

D. For any given reaction equilibrium constant depends on temperature only

Answer: A::B::C::D

 [Watch Video Solution](#)

109. Select the correct statements for following equilibrium:

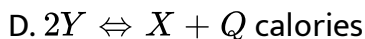
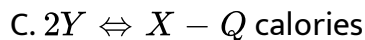
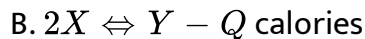
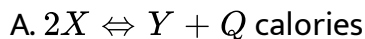
- A. On increasing pressure, melting point decreases while boiling point of CO_2 increases.
- B. On increasing pressure, melting point decreases while boiling point increases for H_2O
- C. On increasing pressure, sublimation temperature increases for both CO_2 and H_2O
- D. On increasing pressure, sublimation temperature increases for CO_2 but decreases for H_2O .

Answer: A::B::C



[View Text Solution](#)

110. Two gases X and Y, one being the dimer of other are at equilibrium. Increase of volume at constant temperature or increase of temperature at constant pressure favours the formation of more Y. The reaction could not be represented by:



Answer: A::B::C



[View Text Solution](#)

111. For the equilibrium $N_2O_4(g) + \text{heat} \rightleftharpoons 2NO_2(g)$, which of the following will increase degree of dissociation (α) of $N_2O_4(g)$?

- A. Increasing temperature at constant volume
- B. Increasing volume at constant temperature
- C. Introducing 'He' gas at constant pressure
- D. Introducing $NO_2(g)$ at constant V and T.

Answer: A::B::C



[View Text Solution](#)

112. Which of the following statements is/are correct ?

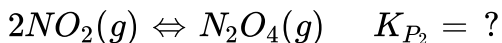
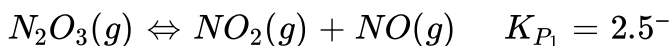
- A. Catalyst cannot change $\Delta_{rxn}G$
- B. Catalyst cannot change equilibrium
- C. Catalyst cannot change rate constant
- D.

Answer: A::B::C



[View Text Solution](#)

113. A flask is initially filled with pure $N_2O_3(g)$ having pressure 2 bar and following equilibria are established.



If at equilibrium partial pressure of $NO(g)$ was found to be 1.5 bar, then:

- A. Equilibrium partial pressure of $N_2O_3(g)$ is 0.5 bar.
- B. Equilibrium partial pressure of $NO_2(g)$ is 0.83 bar.
- C. Equilibrium partial pressure of N_2O_4 is 0.33 bar.
- D. Value of K_{P_2} is 0.48 bar

Answer: A::B::C::D



[View Text Solution](#)

114. Solid ammonium carbamate is taken in an empty closed container and allowed to attain equilibrium as,



choose the incorrect statements :

- A. Equilibrium total pressure is 15 atm
- B. On addition of more solid at equilibrium total pressure decreases at new equilibrium.
- C. On increasing the volume of container, total pressure decreases at new equilibrium.
- D. On increasing temperature, total pressure increases at new equilibrium.

Answer: B::C



[View Text Solution](#)

115. Choose the correct options:

A. Favourable conditions for formation of graphite are high pressure and low temperature from equilibrium diamond

$(d = 3.5g/ml) \Leftrightarrow$ graphite

$(d = 2.3g/ml), \Delta = -1.9kJ/mole$

B. For reaction $N_2O_4(g) \Leftrightarrow 2NO(g)$, degree of dissociation (α) is

$\sqrt{\frac{K}{4P + K_P}}$ where P is equilibrium pressure.

C. For reaction $Cl_2(g) + 3F_2(g) \Leftrightarrow 2ClF_3(g)$, $\Delta H = -329kJ$

,dissociation of $ClF_3(g)$ will be favoured by addition of inert gas at constant pressure.

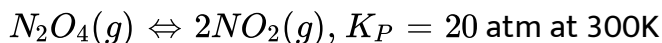
D. Reaction stops at equilibrium (microscopically).

Answer: B::C



View Text Solution

116. In an empty cylinder piston arrangement, $NO_2(g)$ at 2 atm and $N_2O_4(g)$ at 4 atm is taken and the constant pressure of 6 atm and temperature, $27^\circ C$, is maintained.



Which of the following property(ies) of system will change correctly (as given) with time?

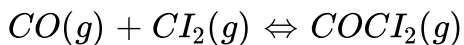
- A. Density of sample will decrease.
- B. Average molar mass of sample will increase.
- C. The colour of solution becomes more and more deeper.
- D. Reaction will not move in any direction.

Answer: A::C



[View Text Solution](#)

117. Following two equilibrium is simultaneously established in a container.



If some Ni(s) is introduced in the container forming $Ni(CO)_4(g)$ then at new equilibrium.

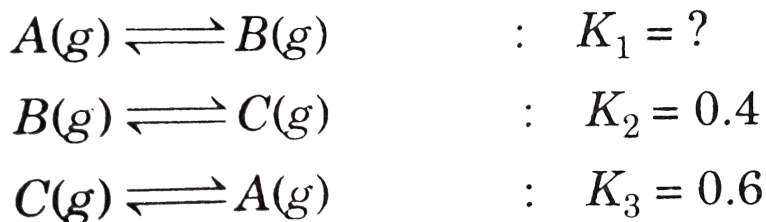
- A. PCl_3 concentration will increase.
- B. PCl_3 concentration will decrease.
- C. Cl_2 concentration will remain same.
- D. PCl_3 concentration will increase.

Answer: B



[View Text Solution](#)

118. The equilibrium between, gaseous isomers A,B and C can be represented as :



A. $[A] + [B] + [C] = 1 \text{ M}$ at any time of the reactions

B. concentration of C is 4.1 M at the attainment equilibrium in all the reactions

C. the value of K_1 is $\frac{1}{0.24}$.

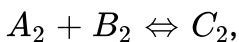
D. isomer $[A]$ is least stable as per thermodynamics

Answer: A::C::D



View Text Solution

119. For the gas phase exothermic reaction.



carried out in a closed vessel, the equilibrium moles of a_2 can be increased by:

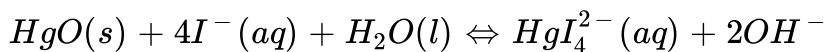
- A. increasing the temperature
- B. decreasing the pressure
- C. adding inert gas at constant pressure
- D. removing some C_2

Answer: A::B::C



[View Text Solution](#)

120. Consider the equilibrium



Which changes will decrease the equilibrium concentration of HgI_4^{2-} ?

A. Addition of 0.1M (aq)

B. Addition of HgO(s)

C. Addition of $H_2O(l)$

D. Addition of KOH(aq)

Answer: C::D

 [View Text Solution](#)

121. For a balanced reversible gaseous reaction :

$A(g) + B(g) \rightleftharpoons 3C(g) + 2D(g)$, which is non-spontaneous at low temperature? Identify the correct option(s).

[Assume ΔH° and ΔS° of reaction to be independent of temperature.]

A. It will be non-spontaneous even at higher temperatures.

- B. If at equilibrium temperature increases, concentration of 'C' and 'D' will also increase at new equilibrium.
- C. If volume of the container is suddenly increased at equilibrium without changing temperature, then concentration of 'C' and 'D' also increases at new equilibrium.
- D. If inert gas is added at constant volume at same temperature, the total pressure will increase.

Answer: B::D



[View Text Solution](#)

122. For a gaseous reaction : $A(g) \rightarrow 3B(g) + C(g)$, ΔH is positive and the reaction attains equilibrium at 1 bar total pressure and 400 K. Identify the incorrect statement(s) regarding the above reaction:

A. On increase of temperature, equilibrium will be shifted in forward direction.

B. When inert gas is introduced into a rigid container containing above equilibria equilibrium shifts towards left.

C. $\Delta_{400}^{\circ} = 0$, for the above reaction.

D. If volume of vessel containing the above equilibria is increased without change in temperature then partial pressure of B decreases as compared to original equilibrium partial pressure of B.

Answer: B::C



[View Text Solution](#)

123. If more than one phase is present in the reversible reaction then it is said to be heterogenous system.

Example: $CaO(s) + CO_2(g)$ Expression of equilibrium constant for

the above reaction can be taken as :

$$K = \frac{[CaO(s)][CO_2(g)]}{[CaO(s)]} \dots (i)$$

Now concentration of $CaO(s) = [CaO(s)]$

$$= \frac{\text{moles of CaO}}{\text{volume of CaO}}$$

as density of $CaO [\rho_{CaO(s)}]$ and molar mass of $CaO [M_{CaO(s)}]$ are a

fixed quantity therefore concentration of pure solid and liquid term is

unchange with respect to time. Hence, equilibrium constant for the

equation (i) can be written as :

$$K_C = [CO_2(g)]$$

$$K_P = P_{CO_2}$$

As K_p and K_c is not containing solid terms therefore, addition or

removal of pure solid and pure liquid has no effect on the equilibrium

process.

K_p for the reaction $NH_4I(s) \rightleftharpoons NH_3(g) + HI(g)$ is $1/4$ at $300K$. If

above equilibrium is established by taking 4 moles of $NH_4I(s)$ in 100

litre container, then moles of $NH_4I(s)$ left in the container at

equilibrium is $\left[\text{Taken } R = 1/12 \text{ Lt. atm mol}^{-1} \text{K}^{-1} \right]$.

A. 1

B. 2

C. 3

D. 4

Answer: B



[View Text Solution](#)

124. If more than one phase is present in the reversible reaction then it is said to be heterogenous system.

Example: $CaO(s) + CO_2(g)$ Expression of equilibrium constant for

the above reaction can be taken as :

$$K = \frac{[CaO(s)][CO_2(g)]}{[CaO(s)]} \dots (i)$$

Now concentration of $CaO(s) = [CaO(s)]$

$$= \frac{\text{moles of CaO}}{\text{volume of CaO}}$$

as density of CaO $[\rho_{CaO(s)}]$ and molar mass of CaO $[M_{CaO(s)}]$ are a

fixed quantity therefore concentration of pure solid and liquid term is unchange with respect to time. Hence, equilibrium constant for the equation (i) can be written as :

$$K_C = [CO_2(g)]$$

$$K_P = P_{CO_2}$$

As K_p and K_c is not containing solid terms therefore, addition or removal of pure solid and pure liquid has no effect on the equilibrium process.

200g of $CaCO_3(g)$ taken in 4Ltr container at a certain temperature. K_c for the dissociation of $CaCO_3$ at this temperature is found to be $1/4$ mole Ltr^{-1} then the concentration of CaO in mole/litre is :

[Given : $\rho_{CaO} = 1.12gcm^{-3}$] [$Ca = 40, O = 16$]

A. $\frac{1}{2}$

B. $\frac{1}{4}$

C. 0.02

D. 20

Answer: C



125. If more than one phase is present in the reversible reaction then it is said to be heterogenous system.

Example: $CaO(s) + CO_2(g)$ Expression of equilibrium constant for the above reaction can be taken as :

$$K = \frac{[CaO(s)][CO_2(g)]}{[CaO(s)]} \dots (i)$$

Now concentration of $CaO(s) = [CaO(s)]$

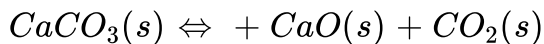
$$= \frac{\text{moles of CaO}}{\text{volume of CaO}}$$

as density of $CaO [\rho_{CaO(s)}]$ and molar mass of $CaO [M_{CaO(s)}]$ are a fixed quantity therefore concentration of pure solid and liquid term is unchange with respect to time. Hence, equilibrium constant for the equation (i) can be written as :

$$K_C = [CO_2(g)]$$

$$K_P = P_{CO_2}$$

As K_p and K_c is not containing solid terms therefore, addition or removal of pure solid and pure liquid has no effect on the equilibrium process.



At equilibrium in the above case, 'a' moles of CaCO_3 , 'b' moles of CaO and 'c' moles of CO_2 are found then identify the wrong statement:

- A. 'a' will decrease with the addition of inert gas at constant pressure.
- B. 'a' will remain constant with the increase in volume.
- C. If volume of the vessel is halved then 'a' increases.
- D. ['b' decreases with the increase in pressure.

Answer: B



[View Text Solution](#)

126. According to Le Chateier principle, when an equilibrium is subjected to any external change, the equilibrium/reaction shifts to comensate the effect of the change. This principle helps in shifting the reaction towards appropriate diections so as to increase % yield of any

reaction.

Which of the following changes cannot cause an increase in extent of dissociation of CH_3COOH in its aqueous solution as per the reaction?



- A. Addition of water into the solution
- B. Addition of NaOH into the solution
- C. Addition of HCl into the solution
- D. Remove of CH_3COO^- from solution.

Answer: C



[View Text Solution](#)

127. According to Le Chateier principle, when an equilibrium is subjected to any external change, the equilibrium/reaction shifts to comensate the effect of the change. This principle helps in shifting the

reaction towards appropriate directions so as to increase % yield of any reaction.

Which of the following changes cannot cause an increase in extent of dissociation of CH_3COOH in its aqueous solution as per the reaction?

A, B, C and D are in equilibrium in a 2 litre container at 400 K and their moles are respectively 4, 5, 8 and 6. If the reaction involved is $3A(g) + 2B(g) \rightleftharpoons C(g) + 5D(g)$ then calculate equilibrium concentration of C when volume is increased to 10 litre.

A. 4M

B. 0.8M

C. 5M

D. none of these

Answer: D



[View Text Solution](#)

128. According to Le Chateier principle, when an equilibrium is subjected to any external change, the equilibrium/reaction shifts to comensate the effect of the change. This principle helps in shifting the reaction towards appropriate diections so as to increase % yield of any reaction.

Which of the following changes cannot cause an incresase in extent of dissociation of CH_3COOH in its aqueous solution as per the reaction?

If is given that conversion of graphite to diamond in an endothermic reaction and the conversion $C_{\text{graphite}} \rightleftharpoons C_{\text{diamond}}$ attains equilibria at 1.5×10^9 Pa at 300K then comment at what pressure equilibria can be attained at 500 K?

A. $P > 1.5 \times 10^9 Pa$

B. $P < 1.5 \times 10^9 Pa$

C. $P = 1.5 \times 10^9 Pa$

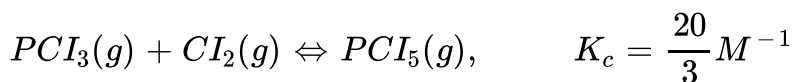
D. At ant pressure

Answer: D

 [View Text Solution](#)

129. A reversible reaction achieves equilibrium when the rates of forward and backward reactions equal. At equilibrium, the ratio of product of molar concentrations of products and the product of molar concentration of reactants each raised to the powers equal to their stoichiometric coefficients, becomes constant. In case of gaseous reactions, the partial pressure of gases may be used in place of their molar concentrations.

If 1 mole of $PCl_5(g)$ and 1 mole of $Cl_2(g)$ is taken in a 10L vessel, then the equilibrium concentration of $PCl_3(g)$ will be :



A. 0.05

B. 0.04

C. 0.06

D. 0.025

Answer: A

 [View Text Solution](#)

130. A reversible reaction achieves equilibrium when the rates of forward and backward reactions equal. At equilibrium, the ratio of product of molar concentrations of products and the product of molar concentration of reactants each raised to the powers equal to their stoichiometric coefficients, becomes constant. In case of gaseous reactions, the partial pressure of gases may be used in place of their molar concentrations.

The equilibrium partial pressure of $N_2O_4(g)$ and $NO_2(g)$ are 4 and 2 atm, respectively. Now, at constant temperature the pressure of system is increased to 60 atm. The new equilibrium partial pressure of $N_2O_4(g)$ becomes.

A. 40atm

B. 46.6atm

C. 20atm

D. 33.4atm

Answer: B



[View Text Solution](#)

131. 4.4 grams of CO_2 are introduced into a 0.82 L flask containing excess solid carbon at $627^\circ C$, so that the equilibrium:

The density of equilibrium gaseous mixture corresponds to an average molecular weight of 36.

$$K_p = \frac{P_{CO}^2}{P_{CO_2}} \text{ and } K_C \frac{[CO]^2}{[CO_2]}$$

$$[R = 0.082\text{Lt-atm/mol-K, } C = 12, O = 16]$$

Total number of moles of equilibrium gaseous mixture is :

A. $\frac{1}{30}$

B. $\frac{2}{15}$

C. $\frac{1}{15}$

D. $\frac{1}{10}$

Answer: D

 Watch Video Solution

132. 4.4 grams of CO_2 are introduced into a 0.82 L flask containing excess solid carbon at $627^\circ C$, so that the equilibrium:

The density of equilibrium gaseous mixture corresponds to an average molecular weight of 36.

$$K_p = \frac{P_{CO}^2}{P_{CO_2}} \text{ and } K_C \frac{[CO]^2}{[CO_2]}$$

$$[R = 0.082 \text{ Lt-atm/mol-K, } C = 12, O = 16]$$

K_p of the reaction $C(s) + CO_2(g) \rightleftharpoons 2CO(g)$ is :

A. 6atm

B. 12atm

C. 24atm

D. 15atm

Answer: A

 Watch Video Solution

133. 4.4 grams of CO_2 are introduced into a 0.82 L flask containing excess solid carbon at $627^\circ C$, so that the equilibrium:

The density of equilibrium gaseous mixture corresponds to an average molecular weight of 36.

$$K_p = \frac{P_{CO}^2}{P_{CO_2}} \text{ and } K_C \frac{[CO]^2}{[CO_2]}$$

$$[R = 0.082\text{Lt-atm/mol-K, } C = 12, O = 16]$$

If in the problem, where actually 1.2g of solid carbon is present initially, how many total moles of CO_2 would have to be introduced initially so that at equilibrium only a trace of carbon remained?

A. 0.25

B. 0.7

C. 0.6

D. 0.4

Answer: B

 [Watch Video Solution](#)

134. Le Chatelier's Principle

If a system at equilibrium is subjected to a change of any one of the factors such as concentration, pressure or temperature, the system adjusts itself in such a way as to nullify the effect of that change.

Change of pressure : If a system consists of gases, then the concentration of all the components can be altered by changing the pressure. To increase the pressure on the system, the volume has to be decreased proportionally. The total number of moles per unit volume will now be more and the equilibrium will shift in the direction in which there is a decrease in number of moles i.e. towards the direction in which there can be decrease in pressure.

Effect of pressure on melting point : There are two types of solids:

(a) Solids whose volume decreases on melting e.g., ice, diamond, carborundum, magnesium nitride and quartz.

Solids (higher volume) \Leftrightarrow Liquid (lower volume) The process of melting is facilitated at high pressure, thus, melting point is lower.

(b) Solids whose volume increase on melting e.g., Fe, Cu, Ag, Au, etc.

Solid (lower volume) \Leftrightarrow Liquid (higher volume) In this case the process of melting becomes difficult at high pressure, thus melting point becomes high.

(c) Solubility of substances : When solid substances are dissolved in water, either heat is evolved (exothermic) or heat is absorbed (endothermic).



In such cases, solubility increases with increase in temperature.

Consider the case of KOH, when this is dissolved, heat is evolved.



In such cases, solubility decreases with increase in temperature.

(d) Solubility of gases in liquids : When a gas dissolves in liquid, there is decrease in volume. Thus increase of pressure will favour the

dissolution of gas in liquid.

A gas 'X' when dissolved in water, heat is evolved. Then solubility of 'X' will increase:

- A. low pressure high temperature
- B. low pressure, low temperature
- C. high pressure, high temperature
- D. high pressure, low temperature

Answer: B

 [Watch Video Solution](#)

135. Le Chatelier's Principle

If a system at equilibrium is subjected to a change of any one of the factors such as concentration, pressure or temperature, the system adjusts itself in such a way as to nullify the effect of that change.

Change of pressure : If a system consists of gases, then the

concentration of all the components can be altered by changing the pressure. To increase the pressure on the system, the volume has to be decreased proportionally. The total number of moles per unit volume will now be more and the equilibrium will shift in the direction in which there is a decrease in number of moles i.e. towards the direction in which there can be decrease in pressure.

Effect of pressure on melting point : There are two types of solids:

(a) Solids whose volume decreases on melting e.g., ice, diamond, carborundum, magnesium nitride and quartz.

Solids (higher volume) \rightleftharpoons Liquid (lower volume) The process of melting is facilitated at high pressure, thus, melting point is lowerd.

(b) Solids whose volume increase on melting e.g., Fe, Cu, Ag, Au, etc.

Solid (lower volume) \rightleftharpoons Liquid (higher volume) In this case the process of melting become difficult at high pressure, thus melting point becomes high.

(c) Solubility of substances : When solid substances are dissolved in water, either heat is evolved (exothermic) or heat is absorbed (endothermic).




In such cases, solubility increase with increase in temperature.

Consider the case of KOH, when this is dissolved, heat is evolved.



In such cases, solubility decrease with increase in temperature.

(d) Solubility of gases in liquids : When a gas dissolves in liquid, there is decrease in volume. Thus increase of pressure will favour the dissolution of gas in liquid.



Above equilibrium is favoured at :

- A. high pressure, low temperature
- B. high pressure, high temperature
- C. low pressure, high temperature
- D. low pressure, low temperature

Answer: C



Watch Video Solution

136. Le Chatelier's Principle

If a system at equilibrium is subjected to a change of any one of the factors such as concentration, pressure or temperature, the system adjusts itself in such a way as to nullify the effect of that change.

Change of pressure : If a system consists of gases, then the concentration of all the components can be altered by changing the pressure. To increase the pressure on the system, the volume has to be decreased proportionally. The total number of mols per unit volume will now be more and the equilibrium will shift in the direction in which there is a decrease in number of moles i.e. towards the direction in which there can be decrease in pressure.

Effect of pressure on melting point : There are two types of solids:

(a) Solids whose volume decreases on melting e.g., ice, diamond, carborundum, magnesium nitride and quartz.

Solids (higher volume) \rightleftharpoons Liquid (lower volume) The process of melting is facilitated at high pressure, thus, melting point is lowered.

(b) Solids whose volume increase on melting e.g., Fe, Cu, Ag, Au, etc.

Solid (lower volume) \rightleftharpoons Liquid (higher volume) In this case the

process of melting become difficult at high pressure, thus melting point becomes high.

(c) Solubility of substances : When solid substances are dissolved in water, either heat is evolved (exothermic) or heat is absorbed (endothermic).



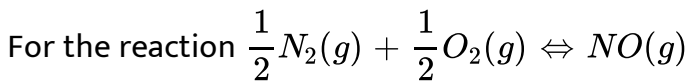
In such cases, solubility increase with increase in temperature.

Consider the case of KOH, when this is dissolved, heat is evolved.



In such cases, solubility decrease with increase in temperature.

(d) Solubility of gases in liquids : When a gas dissolves in liquid, there is decrease in volume. Thus increase of pressure will favour the dissolution of gas in liquid.



If pressure is increased by reducing the volume of the container then:

A. total pressure at equilibrium will change

B. concentration of all the component at equilibrium will change .

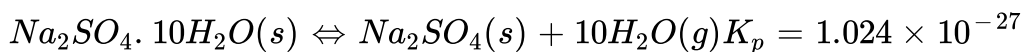
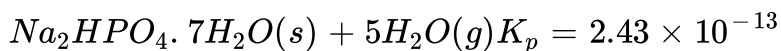
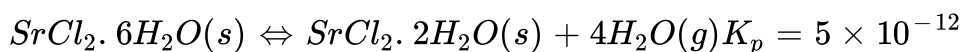
C. concentration of all the component at equilibrium will remain change.

D. equilibrium will shift in the forward direction.

Answer: A::B

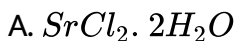
 [Watch Video Solution](#)

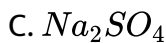
137. Equilibrium constants are given (in atm) for the following reactions at $0^\circ C$:



The vapour pressure of water at $0^\circ C$ is 4.56 torr.

Which is the most effective drying agent at $0^\circ C$?



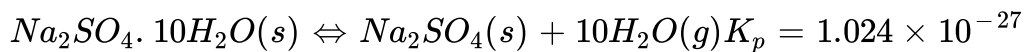
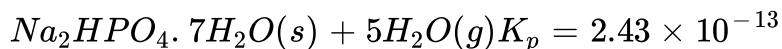
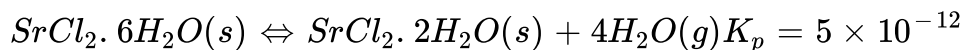


D. All equally

Answer: A

 [View Text Solution](#)

138. Equilibrium constants are given (in atm) for the following reactions at $0^\circ C$:



The vapour pressure of water at $0^\circ C$ is 4.56 torr.

At what relative humidity will $Na_2SO_4 \cdot 10H_2O$ be efflorescent when exposed to air at $0^\circ C$?

A. above 33.33%

B. below 33.33%

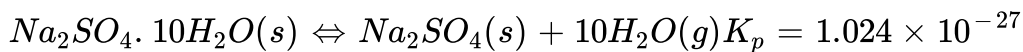
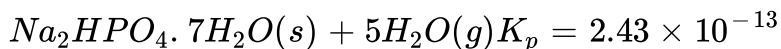
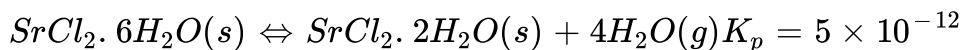
C. above 66.66%

D. below 66.66%

Answer: B

 [View Text Solution](#)

139. Equilibrium constants are given (in atm) for the following reactions at $0^\circ C$:



The vapour pressure of water at $0^\circ C$ is 4.56 torr.

At what relative humidities will Na_2SO_4 be deliquescent (i.e. absorb moisture) when exposed to the air at $0^\circ C$?

A. above 33.33%

B. below 33.33%

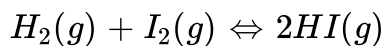
C. above 66.66%

D. below 66.66%

Answer: A

 [View Text Solution](#)

140. In a 7.0 L evacuated chamber, 0.50 mole H_2 and 0.50 mole I_2 react at 427° C. According to reaction



At the given temperature, $K_c = 49$ for the reaction. What is the value of K_p ?

A. 7

B. 49

C. 24.35

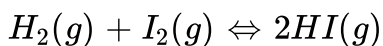
D. None of these

Answer: B



[View Text Solution](#)

141. In a 7.0 L evacuated chamber, 0.50 mole H_2 and 0.50 mole I_2 react at 427°C . According to reaction



At the given temperature, $K_c = 49$ for the reaction. What is the total pressure (atm) in the chamber?

A. 83.14

B. 831.4

C. 8.21

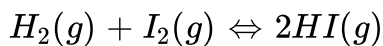
D. None of these

Answer: C



[View Text Solution](#)

142. In a 7.0 L evacuated chamber, 0.50 mole H_2 and 0.50 mole I_2 react at 427° C. According to reaction



At the given temperature, $K_c = 49$ for the reaction. How many moles of the iodine remain unreacted at equilibrium?

A. 0.388

B. 0.112

C. 0.25

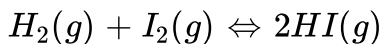
D. 0.125

Answer: B



[View Text Solution](#)

143. In a 7.0 L evacuated chamber, 0.50 mole H_2 and 0.50 mole I_2 react at 427° C. According to reaction



At the given temperature, $K_c = 49$ for the reaction. What is the partial pressure (atm) of HI in the equilibrium mixture?

A. 6.371

B. 12.77

C. 40.768

D. 646.58

Answer: A



[View Text Solution](#)

144. Mass action ratio or reaction quotient Q for a reaction can be calculated using the law of mass action,



$$Q = \frac{[C][D]}{[A][B]}$$

The value of Q decides whether the reaction is at equilibrium or not.

At equilibrium, $Q=K$

For non-equilibrium process $Q \neq K$

When $Q > K$, reaction will be favoured in backward direction and

when $Q < K$, it will be favoured in forward direction. For the reaction :

$2A + B \rightleftharpoons 3C$ at 298 K, $K_c = 49$ A 3 L vessel contains 2, 1 and 3 moles

of A, B and C respectively. The reaction at the same temperature :

A. must proceed in forward direction.

B. must proceed in back direction


C. must be predicted

D. cannot be predicted

Answer: A

 [Watch Video Solution](#)

145. Mass action ratio or reaction quotient Q for a reaction can be calculated using the law of mass actionl,



$$Q = \frac{[C][D]}{[A][B]}$$

The value of Q decides whether the reaction is at equilibrium or not.

At equilibrium, $Q=K$

For non-equilibrium process $Q \neq K$

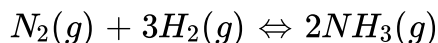
When $Q > K$, reaction will be favoured in backward direction and

when $Q < K$, it will be favoured in forward direction. In a reaction

mixture containing H_2 , N_2 and NH_3 at partial pressure of 2 atm, 1 atm

and 3 atm respectively, the value of K_p at 725 K is $4.28 \times 10^{-5} \text{ atm}^{-2}$.

In which direction the net reaction will go ?



- A. Forward
- B. Backward
- C. No net reaction
- D. Direction cannot be predicated

Answer: B



146. Mass action ratio or reaction quotient Q for a reaction can be calculated using the law of mass action,



$$Q = \frac{[C][D]}{[A][B]}$$

The value of Q decides whether the reaction is at equilibrium or not.

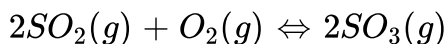
At equilibrium, $Q=K$

For non-equilibrium process $Q \neq K$

When $Q > K$, reaction will be favoured in backward direction and

when $Q < K$, it will be favoured in forward direction.

In the following reaction :



The equilibrium is not attained. The rate of forward reaction is greater than that of backward reaction. Thus, which of the following is the correct relation between K_p and Q_p ?

A. $K_p = Q_p$

B. $Q_p < K_p$

C. $Q_p < K_p$

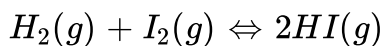
D. $K_p = Q_p = 1$

Answer: C



[View Text Solution](#)

147. If we know the equilibrium constant for a particular reaction, we can calculate the concentration in the equilibrium mixture from the initial concentrations. Generally only the initial concentration of reactions are given. In a study of equilibrium



1 mole of H_2 and 3 mol of I_2 gave rise at equilibrium to x mol of HI, Further addition of 2 mol of H_2 gave an additional x mol of HI. What is x ?

A. 0.5

B. 1

C. 1.5

D. None of these

Answer: C



[View Text Solution](#)

148. If we know the equilibrium constant for a particular reaction, we can calculate the concentration in the equilibrium mixture from the initial concentrations. Generally only the initial concentration of reactions are given. In above problem, what is K_p of the reaction?

A. 1

B. 2


C. 4

D. None of these


Answer: C

 [View Text Solution](#)


149. The shown snapshots represents five molecular level scenes of a gaseous mixture as it reaches equilibrium over a time in a vessel of volume 1 litre.




(A)




(B)



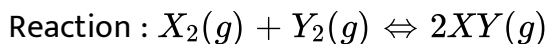
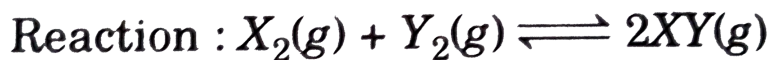
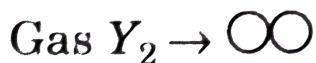
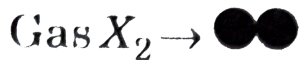
(C)



(D)



(E)



If each particle represents 0.2 moles then what will be the value of reaction quotient (Q) for scene B?

A. 0.36

B. 0.18

C. 4

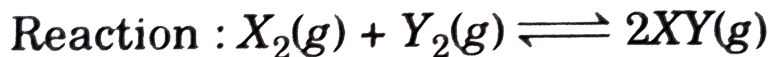
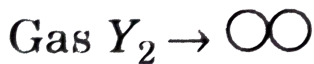
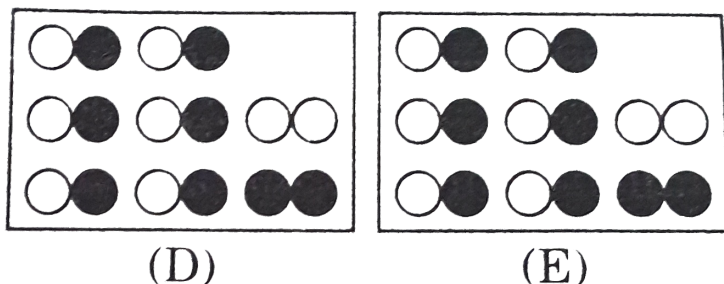
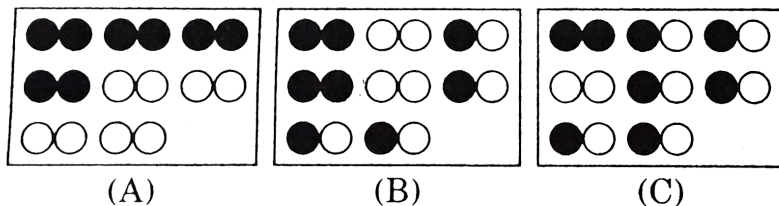
D. 5

Answer: C




[View Text Solution](#)

150. The shown snapshots represents five molecular level scenes of a gaseous mixture as it reaches equilibrium over a time in a vessel of volume 1 litre.




Reaction : $X_2(g) + Y_2(g) \rightleftharpoons 2XY(g)$ In snapshot 'A-E' if each particle represents 0.1 mole then on introducing another 0.4 mole each of X_2

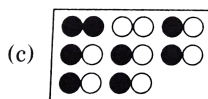
and Y_2 in scene A, the equilibrium stage can be represented by which of the picture?




A.



B.



C.




D.

Answer: A




[View Text Solution](#)


151. The shown snapshots represents five molecular level scenes of a gaseous mixture as it reaches equilibrium over a time in a vessel of volume 1 litre.




(A)




(B)



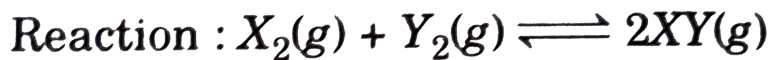
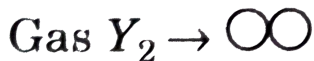
(C)



(D)



(E)



Reaction : $X_2(g) + Y_2(g) \rightleftharpoons 2XY(g)$ Which part of the 'film strip' represents the equilibrium irrespective of the value of each particle in terms of moles?

A. A

B. B

C. C

D. None of these

Answer: C

 [View Text Solution](#)

152. 10 moles of pure PCl_5 gas is put into a closed container of volume 'V' and temperature 'T' and allowed to reach equilibrium, at an equilibrium pressure 20 atm. The pure PCl_5 is found to be 50% dissociated at equilibrium.

$PCl_5(g) \rightleftharpoons PCl_3(g) + Cl_2(g)$ K_p for the above the reaction is :

A. $\frac{20}{3}$

B. 100

C. $\frac{10}{3}$

D. $\frac{20}{3}$

Answer: A

153. 10 moles of pure PCl_5 gas is put into a closed container of volume ' V ' and temperature ' T ' and allowed to reach equilibrium, at an equilibrium pressure 20 atm. The pure PCl_5 is found to be 50% dissociated at equilibrium.

$PCl_5(g) \rightleftharpoons PCl_3(g) + Cl_2(g)$ The partial pressure of PCl_5 , if equilibrium is established at new equilibrium pressure 35 atm by changing volume is :

- A. 10 atm
- B. 15 atm
- C. 18 atm
- D. 12 atm

Answer: B

154. 10 moles of pure PCl_5 gas is put into a closed container of volume 'V' and temperature 'T' and allowed to reach equilibrium, at an equilibrium pressure 20 atm. The pure PCl_5 is found to be 50% dissociated at equilibrium.

$PCl_5(g) \rightleftharpoons PCl_3(g) + Cl_2(g)$ If 20 moles of $PCl_5(g)$ is added to original equilibrium mixture keeping total pressure constant to 20 atm at same temperature 'T', then ratio of new equilibrium volume to the initial volume V will be :

A. 1.5

B. 2.0

C. 1.8

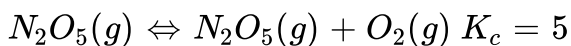
D. 3.0

Answer: D



[View Text Solution](#)

155. Consider following reaction at 300 K :



$N_2O_5(g) \rightleftharpoons N_2O(g) + O_2(g)$ If 4 moles N_2O_5 is kept in 1 L, Container to attain equilibrium and at equilibrium 5 moles of O_2 are produced, then at equilibrium 5 moles of O_2 are produced, then at equilibrium moles of N_2O_3 will be :

A. 1

B. 3

C. 2

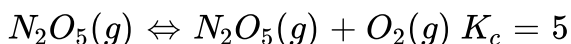
D. 4

Answer: A



[View Text Solution](#)

156. Consider following reaction at 300 K :



$N_2O_5(g) \rightleftharpoons N_2O(g) + O_2(g)$. For second reaction, if energy of activation of forward and backward reaction are respectively 85 and 42KJ/mole , then at 400K , K_c for the second reaction is :

A. 10

B. < 10

C. > 10

D. can be greater or less than 10

Answer: C



[View Text Solution](#)

157. According to Le Chatelier's principle, on applying any external force to disturb equilibrium, the reaction moves in that direction in which effect of external force is minimised as far as possible. A container whose volume is V contains an equilibrium mixture that contains 2 moles each of PCl_5 , PCl_3 and Cl_2 (all gases). The pressure is 3atm

and temperature is T . A certain amount of $Cl_2(g)$ is now introduced keeping the pressure and temperature constant until the equilibrium volume changes to $2V$.

$PCl_5(g) \rightleftharpoons PCl_3(g) + Cl_2(g)$. The moles Cl_2 that was added is :

A. 2

B. $\frac{10}{7}$

C. $\frac{8}{3}$

D. $\frac{20}{3}$

Answer: D



Watch Video Solution

158. According to Le Chatelier's principle, on applying any external force to disturb equilibrium, the reaction moves in that direction in which effect of external force is minimised as far as possible. A container whose volume is V contains an equilibrium mixture that contains 2

moles each of PCl_5 , PCl_3 and Cl_2 (all gases). The pressure is 3atm and temperature is T. A certain amount of $Cl_2(g)$ is now introduced keeping the pressure and temperature constant until the equilibrium volume changes to 2 V.

$PCl_5(g) \rightleftharpoons PCl_3(g) + Cl_2(g)$. The equilibrium constant K of the reaction :

A. 1

B. 2

C. 3

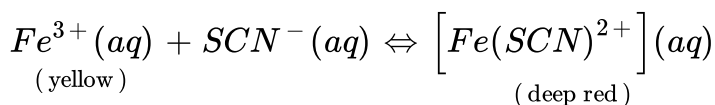
D. 4

Answer: A

 [Watch Video Solution](#)

159. The state of equilibrium is in a dynamic balance between forward and backward reaction. This balance can be disturbed by changing

concentration, temperature or pressure. If done so a certain net change occurs in the system. The direction of change can be predicted with the help of Le Chatelier principle. It states that when a system in equilibrium is disturbed by a change in concentration of temperature, a 'net' change occurs in it in a direction that tends to decrease the disturbing factor. For the equilibrium,



Select the correct option.

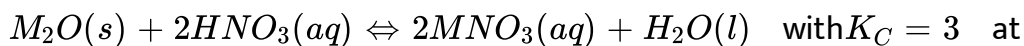
- A. Addition of $H_2C_2O_4$ which forms $[Fe(C_2O_4)_3]^{3-}$ deepens red colour.
- B. Addition of H_2O has no effect on the colour.
- C. Addition of SCN^{-} intensifies red colour.
- D. Addition of Hg^{2+} which forms $[Hg(SCN)_4]^{2-}$ deepens red colour.

Answer: C



View Text Solution

160. The state of equilibrium is in a dynamic balance between forward and backward reaction. This balance can be disturbed by changing concentration, temperature or pressure. If done so a certain net change occurs in the system. The direction of change can be predicted with the help of Le Chatelier principle. It states that when a system in equilibrium is disturbed by a change in concentration of temperature, a 'net' change occurs in it in a direction that tends to decrease the disturbing factor. Consider the following exothermic heterogenous equilibrium,



300K. Select the incorrect option.

- A. Addition of $H_2O(l)$ to above equilibrium has no effect on equilibrium composition (%) of HNO_3 and MNO_3 .
- B. On dilution, concentration of both HNO_3 and MNO_3 decreases.
- C. At 310 K, $K_C < 3$.

D. K_C is dependent on equilibrium concentration of HNO_3 .

Answer: D

 [View Text Solution](#)

161. $2Cl(s) + O_2(g) \rightleftharpoons 2CO(g)$ $\Delta H < 0$. What is the equilibrium expression for the reaction represented by the equation above?

A. $K = \frac{2[CO]}{2[C] + [O_3]}$

B. $K = \frac{2[CO]}{[O_2]}$

C. $K = \frac{[CO]^2}{[C]^2 + [O_2]}$

D. $K = \frac{[CO]^2}{[O_2]}$

Answer: D

 [Watch Video Solution](#)

162. $2C(s) + O_2(g) \rightleftharpoons 2CO(g)$ $\Delta H < 0$. If the reaction is at equilibrium with excess $C(s)$ remaining, what change will increase the quantity of $CO(g)$ for the reaction at equilibrium ?

(P) Adding $C(s)$

(Q) Increasing the temperature

(R) Increasing the pressure.

A. P only

B. R only

C. P,Q and R

D. None of these

Answer: D



Watch Video Solution

163. $H_2(g) + I_2(g) \rightleftharpoons 2HI(g)$ ($\Delta H = +51.8 \text{ kJ} = \text{kJ}$) Which would increase the equilibrium quantity of $HI(g)$? Assume the system has reached equilibrium with all three components present.

(P) Increasing pressure

(Q) Increasing temperature

A. P only

B. Q only

C. Both P and Q

D. Neither P nor Q

Answer: B



[Watch Video Solution](#)

164. $H_2(g) + I_2(g) \rightleftharpoons 2HI(g)$ ($\Delta H = +51.8 \text{ kJ} = \text{kJ}$) What is the equilibrium constant expression for this system?

$$\text{A. } K = \frac{[HI]^2}{[H_2][I_2]}$$

$$\text{B. } K = \frac{[H_2][I_2]}{[HI]^2}$$

$$\text{C. } K = \frac{2[HI]}{[H_2][I_2]}$$

$$\text{D. } K = \frac{[HI]^2}{[H_2]}$$

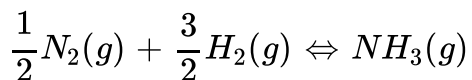
Answer: D



Watch Video Solution

165. $2NH_3(g) \rightleftharpoons N_2(g) + 3H_2(g)$ $K_p = 80.0$ at 250°C . What is K_p

for this reaction?



A. 0.0125

B. 0.112

C. 8.94

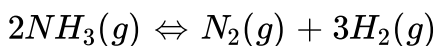
D. 40.0

Answer: B



Watch Video Solution

166. $2NH_3(g) \rightleftharpoons N_2(g) + 3H_2(g)$ $K_p = 80.0$ at 250°C . What is the expression for K_c at 250°C for this reaction?



A. $K_c = \frac{K_p}{(RT^2)}$

B. $K_c = \frac{K_p}{(RT)}$

C. $K_c = K_p(RT)^2$

D. $K_c = K_p(RT)$

Answer: A



Watch Video Solution

167. $2NO(g) + O_2(g) \rightleftharpoons 2NO_2(g)$ Which would increase the partial pressure of $NO_3(g)$ at equilibrium?

- A. Decreasing the volume of the system
- B. Adding a mole gas to increase the pressure of the system
- C. Removing some $NO(g)$ from the system
- D. Adding an appropriate catalyst

Answer: A

 [View Text Solution](#)

168. $2NO(g) + O_2(g) \rightleftharpoons 2NO_2(g)$ At a certain temperature the equilibrium concentration for this system are :

$[NO]=0.25M$, $[O_2]=0.24M$, $[NO_2]=0.18M$.

What is the value of K_c at this temperature?

- A. 0.063

B. 0.50

C. 1.4

D. 2.0

Answer: B

 [View Text Solution](#)

Column-I		Column-II	
(a)	$\text{N}_2(\text{g}) + 3\text{H}_2(\text{g}) \rightleftharpoons 2\text{NH}_3(\text{g})$ <p style="text-align: center;">$(t = 300^\circ \text{C})$</p>	(p)	$\Delta n_g > 0$
(b)	$\text{PCl}_5(\text{g}) \rightleftharpoons \text{PCl}_3(\text{g}) + \text{Cl}_2(\text{g})$ <p style="text-align: center;">$(t = 50^\circ \text{C})$</p>	(q)	$K_P < K_C$
(c)	$\text{C}(\text{s}) + \text{H}_2\text{O}(\text{g}) \rightleftharpoons \text{CO}(\text{g}) + \text{H}_2(\text{g})$	(r)	K_P not defined
(d)	$\text{CH}_3\text{COOH}(\text{l}) + \text{C}_2\text{H}_5\text{OH}(\text{l})$ $\rightleftharpoons \text{CH}_3\text{COOC}_2\text{H}_5(\text{l}) + \text{H}_2\text{O}(\text{l})$	(s)	$P_{\text{initial}} > P_{\text{eq}}$

169.

 [View Text Solution](#)

Column-I (Assume only reactant were present initially)		Column-II	
(a)	For the equilibrium, $\text{NH}_4\text{I}(s) \rightleftharpoons \text{NH}_3(g) + \text{HI}(g)$, if pressure is increased at equilibrium.	(p)	Forward shift
(b)	For the equilibrium, $\text{N}_2(g) + 3\text{H}_2(g) \rightleftharpoons 2\text{NH}_3(g)$ volume is increased at equilibrium.	(q)	No change
(c)	For the equilibrium, $\text{H}_2\text{O}(g) + \text{CO}(g) \rightleftharpoons \text{H}_2(g) + \text{CO}_2(g)$ inert gas is added at constant pressure at equilibrium.	(r)	Backward shift
(d)	For the equilibrium, $\text{PCl}_5 \rightleftharpoons \text{PCl}_3 + \text{Cl}_2$ then Cl_2 is removed at equilibrium.	(s)	Final pressure is more than initial pressure

170.



[View Text Solution](#)

Column-I		Column-II (At equilibrium)	
(a)	$N_2O_4(g) \rightleftharpoons 2NO_2(g)$ On increasing volume at constant temperature	(p)	Density of gaseous mixture remain constant

171.

(b)	$H_2(g) + I_2(g) \rightleftharpoons 2HI(g)$ On addition of inert gas He at constant P and T	(q)	Density of gaseous mixture decreases
(c)	$2NO(g) + Br_2(g) \rightleftharpoons 2NOBr(g)$ On decreasing pressure at constant temperature	(r)	Average molar mass of gaseous mixture increases
(d)	$CaCO_3(s) \rightleftharpoons CaO(s) + CO_2(g)$ On increasing temperature at constant volume	(s)	Total number of moles of gases increases
		(t)	Value of equilibrium constant increases

 [View Text Solution](#)

172. Match the column for the following reaction started with $NH_2COONH_4(s) \rightleftharpoons 2NH_3(g) + CO_2(g)$

At equilibrium, partial pressure of NH_3 and CO_2 are P_{NH_3} and P_{CO_2}

respectively then :

Column-I		Column-II	
(a)	Partial pressure of $\text{NH}_2\text{COONH}_4(s)$	(p)	$p_{\text{NH}_3}^2 \times p_{\text{CO}_2}$
(b)	K_p	(q)	$p_{\text{NH}_3} + p_{\text{CO}_2}$
(c)	Total pressure at equilibrium	(r)	$(p_{\text{NH}_3}^2 \times p_{\text{CO}_2}) \times (RT)^{-3}$
(d)	K_C	(s)	Zero
		(t)	$\frac{3}{2} P_{\text{NH}_3}$

 [View Text Solution](#)

Column-I		Column-II	
(a)	$2\text{HI}(g) \rightleftharpoons \text{H}_2(g) + \text{I}_2(g)$	(p)	$K_p = P_{eq} \times \alpha^2 / (1 - \alpha^2)$
(b)	$\text{PCl}_5(g) \rightleftharpoons \text{PCl}_3(g) + \text{Cl}_2(g)$	(q)	$K_p = 4P_{eq} \times \alpha^2 / (1 - \alpha^2)$
(c)	$\text{N}_2\text{O}_4 \rightleftharpoons 2\text{NO}_2$	(r)	$\alpha = 2\sqrt{K_p} / (2\sqrt{K_p} + 1)$
(d)	$2\text{SO}_3(g) \rightleftharpoons 2\text{SO}_2(g) + \text{O}_2(g)$	(s)	$M_{eq} = M_0$ [M_0 : Initial molecular weight]
		(t)	$M_{eq} < M_0$ [M : Avg mol. wt. of Eq^m . mixture]

173.

 [View Text Solution](#)

Column-I		Column-II	
(a)	$\text{H}_2\text{O}(l) \rightleftharpoons \text{H}_2\text{O}(g)$ Addition of $\text{H}_2\text{O}(l)$ at equilibrium	(p)	Favours forward reaction
(b)	$\text{I}_3^-(aq) \rightleftharpoons \text{I}_2(aq) + \text{I}^-(aq)$ Addition of $\text{H}_2\text{O}(l)$ at equilibrium	(q)	Does not shift equilibrium state
(c)	$2\text{AB}(g) \rightleftharpoons \text{A}_2(g) + \text{B}_2(g)$ On increasing the volume at equilibrium	(r)	Concentration of product decrease

174.

(d)	$\text{A}_2(g) \rightleftharpoons 2\text{A}(g)$ Addition of catalyst at equilibrium	(s)	Concentration of product remain constant
		(t)	Concentration of reactant decrease



[View Text Solution](#)

Column-I		Column-II	
(a)	$K_p < K_c$	(p)	$N_2 + 3H_2 \rightleftharpoons 2NH_3$
(b)	Introduction of inert gas at constant pressure will decrease the concentration of reactants	(q)	$PCl_5(g) \rightleftharpoons PCl_3(g) + Cl_2(g)$
(c)	K_p° is dimensionless	(r)	$2NO_2(g) \rightleftharpoons N_2O_4(g)$
(d)	Temperature increase will shift the reaction on product side	(s)	$NH_3(g) + HI(g) \rightleftharpoons NH_4I(s)$

175.



[View Text Solution](#)

Column-I (Reactions)		Column-II (Favourable Conditions)	
(a)	Oxidation of nitrogen $N_2(g) + O_2(g) + 180.5 \text{ kJ} \rightleftharpoons 2NO(g)$	(p)	Addition of inert gas at constant pressure
(b)	Dissociation of $N_2O_4(g)$ $N_2O_4(g) + 57.2 \text{ kJ} \rightleftharpoons 2NO_2(g)$	(q)	Decrease in pressure
(c)	Oxidation of $NH_3(g)$ $4NH_3(g) + 5O_2(g) \rightleftharpoons 4NO(g) + 6H_2O(g) + 905.6 \text{ kJ}$	(r)	Decrease in temperature
(d)	Formation of $NO_2(g)$ $NO(g) + O_3(g) \rightleftharpoons NO_2(g) + O_2(g) + 200 \text{ kJ}$	(s)	Increase in temperature

176.



[View Text Solution](#)

Column-I (Reactions)		Column-II (If α is negligible w.r.t. 1, $V = 1$ litre)	
(a)	$2X(g) \rightleftharpoons Y(g) + Z(g)$	(p)	$\alpha = 2 \times \sqrt{K_c}$
(b)	$X(g) \rightleftharpoons Y(g) + Z(g)$	(q)	$\alpha = 3 \times \sqrt{K_c}$
(c)	$3X(g) \rightleftharpoons Y(g) + Z(g)$	(r)	$\alpha = (2K_c)^{1/3}$
(d)	$2X(g) \rightleftharpoons Y(g) + 2Z(g)$	(s)	$\alpha = \sqrt{K_c}$

177.



[View Text Solution](#)

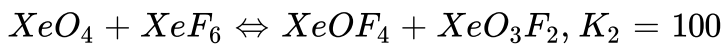
178. Density of equilibrium mixture of N_2O_4 and NO_2 at 1 atm and 384 K is 1.84 g dm^{-3} . Calculate the equilibrium constant of the reaction.



[Watch Video Solution](#)

179. For reaction





Find equilibrium constant of $\frac{1}{2}\text{XeO}_4 + \text{HF} \rightleftharpoons \frac{1}{2}\text{XeO}_3\text{F}_2 + \frac{1}{2}\text{H}_2\text{O}$

 [View Text Solution](#)

180. For the reversible reaction $A(g) + B(s) \rightleftharpoons 2C(g)$, $\frac{K_p}{K_c} = (RT)^x$.

Hence x is :

 [Watch Video Solution](#)

181. In the following reaction :

$3A(g) + B(g) \rightleftharpoons 2C(g) + D(g)$ initial mol of B is double of A. At

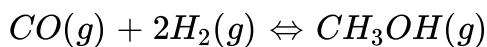
equilibrium mol of A and C are equal . Hence % dissociation of B is :

 [View Text Solution](#)

182. 138 gm N_2O_4 is introduced into 8.21 litre container at 300 K. Temperature is increased to 600 K where it dissociates into NO_2 . If equilibrium partial pressure of N_2O_4 and NO_2 are equal than K_p (in atm) for $N_2O_4(g) \rightleftharpoons 2NO_2$ at 600 K.

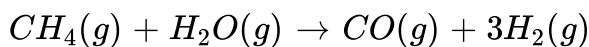
 [Watch Video Solution](#)

183. CH_3OH , methanol can be prepared from CO and H_2 .



The value of K_p at 500 K is 6.23×10^{-3}

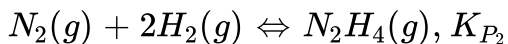
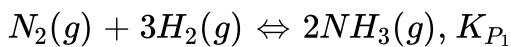
When total pressure (in atm) at equilibrium is required to convert 25% of CO to CH_3OH at 500 K if CO and H_2 comes from



Given your answer excluding decimal places.

 [View Text Solution](#)

184. In a vessel, two equilibrium are simultaneously established at the same temperature as follows



Initially , vessel contains N_2 and H_2 in molar ratio 9:13. The equilibrium pressure is $7P_0$ in which pressure due to NH_3 is P_0 and due to H_2 to $2P_0$

Find the value of $\frac{K_{P_2}}{K_{P_1}}$

 [Watch Video Solution](#)

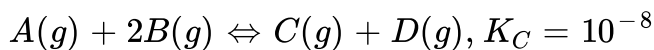
185. For the reaction $3A(g) + B(g) \rightleftharpoons 2C(g)$ at a given temperature, $K_c=9.0$ what must be the volume (in L) of the flask , if a mixture of 2.0 mol each of A,B and C exist in equilibrium ?

 [Watch Video Solution](#)

186. Starting with pure 'A' molar mass becomes half of its initial value at equilibrium as shown by a reaction $A(g) \rightleftharpoons nB(g)$.if A is 50% dissociated at equilibrium, find value of n.

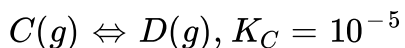
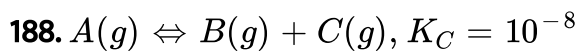
 [View Text Solution](#)

187. 2 mol of C(g) and 4 mole of D(g) are taken in a closed rigid container of 1 litre volume and allowed to attain equilibrium as :



Calculate the equilibrium concentration of C(g).(If your answer in scientific notation is $x \times 10^{-y}$ then fill y).

 [Watch Video Solution](#)




1 mole of A(g) is taken in a closed container of volume 1 litre at

temperature T . If concentration of D at equilibrium is 10^{-x} , then , calculate value of x .

 [Watch Video Solution](#)

189. 2 mole of X and 1 mole of Y are allowed to react in a 2 litre container. when equilibrium is reached, the following reaction occurs



If the moles of Z at equilibrium is 0.5 then what is equilibrium constant K_C ?

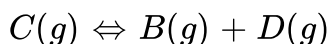
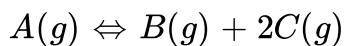
 [Watch Video Solution](#)

190. For the reaction : $A(g) \rightleftharpoons 2B(g)$, $K_p = 4.0$ bar. The equilibrium pressure of $A(g)$ is 1.0 bar. Now the equilibrium mixture is compressed reversibly and isothermally such that the final total pressure of system becomes 8 bar. The partial pressure of $A(g)$ (in bar) at this new equilibrium is :



Watch Video Solution

191. Pure gas 'A' was taken in a closed container at an initial pressure of 5 atm. The pressure in the container changed due to reactions.



If the total pressure due to mixture of gas A, B, C and D was found to be 10 atm, in which pressure due to C was 3 atm. Find K_p for first equilibria.



Watch Video Solution

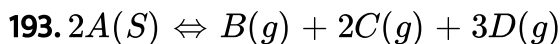
192. If Cl_2 , HCl and O_2 are mixed in such a manner that the partial pressure of each is 2 atm and the mixture (V.P.=0.5 atm). What would be the approximate partial pressure of Cl_2 when equilibrium is attained at temperature (T)? If your answer in scientific notation is $\times 10^{-y}$, write the value of y.

[Given: $2H_2O(g) + 2Cl_2(g) \rightleftharpoons 4HCl(g) + O_2(g)$, $K_p = 12 \times 10^8$

atm)



[View Text Solution](#)



Total pressure developed in closed container by decomposition of A at equilibrium is 12 atm at $727^\circ C$. Calculate ΔG° (in cal) of the reaction at $727^\circ C$.

($R=2\text{cal/mol-K}$, $\ln 2=0.7$, $\ln 3=1.1$)

[Fill your answer as $\frac{|\Delta G^\circ|}{100}$].



[Watch Video Solution](#)