



CHEMISTRY

BOOKS - GRB CHEMISTRY (HINGLISH)

REDOX REACTIONS

Others

1. Find the of oxidation of Co in $Ag[Co(CO)_4]$

A. 1

B. -1

C. Zero

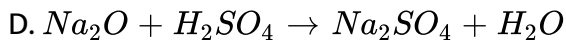
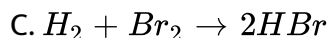
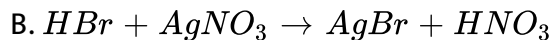
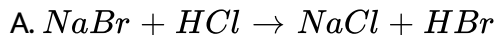
D. None of these

Answer: b



Watch Video Solution

2. Which of the following reactions involve oxidation and reduction?



Answer: c



Watch Video Solution

3. When ammonia is passed over heated copper oxide, the metallic copper is obtained. The reaction shows that ammonia is :

A. a dehydrating agent

B. an oxidising agent

C. a reducing agent

D. a nitrating agent

Answer: c

 [Watch Video Solution](#)

4. Manganese achieves its maximum oxidation state in its compound :

A. MnO_2

B. Mn_3O_4

C. $KMnO_4$

D. K_2MnO_4

Answer: c

 [Watch Video Solution](#)

5. Oxidation number of underlined elements are N_2O_5 , SO_3^{2-} , NH_4^+ :

A. +5, 2+, -3

B. +6, -2, +3

C. +6, +2, -3

D. +5, +4, -3

Answer: d



Watch Video Solution

6. Phosphorous has the oxidation state of +3 in :

A. phosphours acid (H_3PO_3)

B. ortho phosphoric acid (H_3PO_4)

C. meta phosphoric acid (HPO_3)

D. pyro phosphoric acid ($H_4P_2O_7$)

Answer: a



Watch Video Solution

7. Which statement is wrong?

- A. Oxidation number of oxygen is +1 in peroxides
- B. Oxidation number of oxygen is +2 in oxygen difluoride
- C. Oxidation number of oxygen is $-\frac{1}{2}$ in superoxides
- D. Oxidation number of oxygen is (- 2) in most of its compounds

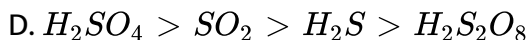
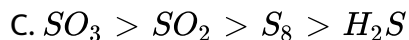
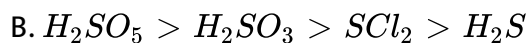
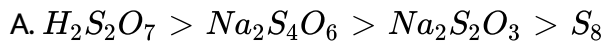
Answer: a



Watch Video Solution

8. The incorrect order of decreasing oxidation number of S in compound

is :



Answer: d

 [Watch Video Solution](#)

9. The reaction $3ClO^- (aq) \rightarrow ClO_3^- (aq) + 2Cl^- (aq)$ an example of :

A. oxidation

B. reduction

C. disproportionation

D. decomposition reaction

Answer: c

 [Watch Video Solution](#)

10. Oxidizing agents are species which :

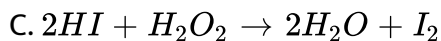
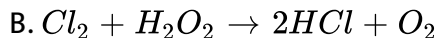
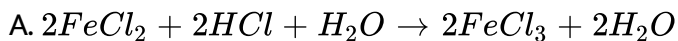
- A. lose electrons
- B. gain electrons
- C. neither lose nor gain electrons
- D. take part of the solid-state reactions

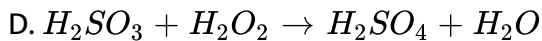
Answer: b



Watch Video Solution

11. In which of the following reactions does H_2O_2 acts as a resucing agents ?





Answer: b

 [Watch Video Solution](#)

12. The oxidation number of an atom in a given species (molecule, ion of free atom) is the :

A. actual charge of the atom

B. valency of the atom

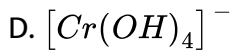
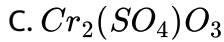
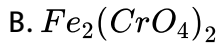
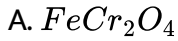
C. formal charge of the atom

D. actual charge of the atom is the atom exists as a monatomic ion, or the hypothetical charge assigned to the atom in the species by simple rules.

Answer: d

 [Watch Video Solution](#)

13. The oxidation number of Cr is $+6$ in :

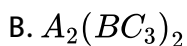


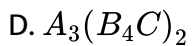
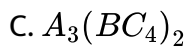
Answer: b



Watch Video Solution

14. A compound contains three elements A , B and C , if the oxidation number of $A = +2$, $B = +5$ and $C = -2$ then possible formula of the compound is





Answer: c

 [Watch Video Solution](#)

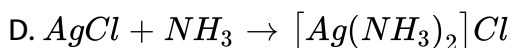
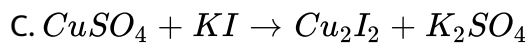
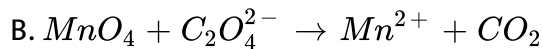
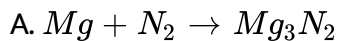
15. Oxidation is a process in which :

- A. oxidation number increases
- B. electrons are lost
- C. de-electronation takes place
- D. all the above happen

Answer: d

 [Watch Video Solution](#)

16. Which of the following is not a redox reaction?



Answer: d



Watch Video Solution

17. Oxidation states of Cu and Fe in $CuFeS_2$ are respectively :

A. I and II

B. II and III

C. I and III

D. II and II

Answer: a

 [Watch Video Solution](#)

18. What is the oxidation state of *Sn* in $Ca_2Sn_2Si_6O_{18}$?

A. I

B. II

C. III

D. IV

Answer: d

 [Watch Video Solution](#)

19. Consider the salt $K_xH_y(C_2O_4)_z \cdot 2H_2O$.

The relationship between x, y and z is :

A. $x + y - z = 0$

B. $x + y = 2z$

C. $x + y + z = 0$

D. None of these

Answer: b

 [Watch Video Solution](#)

20. The average oxidation state of sulphur in sodium tetrathionate

($Na_2S_4O_6$) is :

A. 0

B. 5

C. 2.5

D. 3.0

Answer: c

 [Watch Video Solution](#)

21. The difference in the oxidation numbers of two types of sulphur atoms in $Na_2S_4O_6$ is.....

A. 5

B. 4

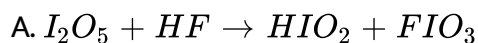
C. 3

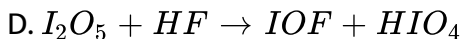
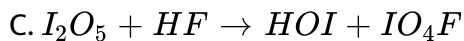
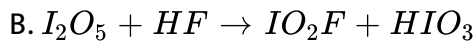
D. 2

Answer: a

 [Watch Video Solution](#)

22. Select the reaction which describes the existence of $I_2O_5(s)$ as $(IO_2^+)(IO_3^-)$:





Answer: b



Watch Video Solution

23. In $FeCr_2O_4$, the oxidation numbers of Fe and Cr are :

A. +2 and +3

B. 0 and +2

C. +2 and +6

D. +3 and +6

Answer: a



Watch Video Solution

24. The oxidation number of P in $Mg_2P_2O_7$ is

A. +3

B. +2

C. +5

D. -3

Answer: c



Watch Video Solution

25. The oxidation states of sulphur in the anions SO_3^{2-} , $S_2O_4^{2-}$, and

$S_2O_6^{2-}$ follow the order

A. $S_2O_6^{2-} < S_2O_4^{2-} < SO_3^{2-}$

B. $S_2O_4^{2-} < SO_3^{2-} < S_2O_6^{2-}$

C. $SO_3^{2-} < S_2O_4^{2-} < S_2O_6^{2-}$

D. $S_2O_4^{2-} < S_2O_6^{2-} < SO_3^{2-}$

Answer: b

 Watch Video Solution

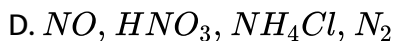
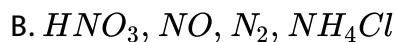
26. The resonating structures of cyanate ion are $O = C = \overset{1-}{N} \leftrightarrow \overset{1-}{O} - C \equiv N \leftrightarrow \overset{1+}{C} - \overset{2-}{N}$. The correct set of oxidation states of O, C and N respectively with the most stable structure out of the above is :

- A. -2, +4, 3
- B. -2, +4, -3
- C. 2, +4, -3
- D. 0, +4, -5

Answer: b

 Watch Video Solution

27. Which ordering of compounds is according to the decreasing order of the oxidation state of nitrogen ?



Answer: b



Watch Video Solution

28. In the reaction $2Ag + 2H_2SO_4 \rightarrow Ag_2SO_4 + 2H_2O + SO_2$, H_2SO_4 acts as a/an

A. an oxidizing agent

B. a reducing agent

C. a catalyst

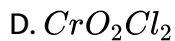
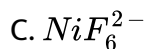
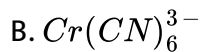
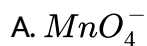
D. an acid as well as an oxidant

Answer: d

 [Watch Video Solution](#)

29. Among these, identify the species with an atom in +6 oxidation state:

.



Answer: d

 [Watch Video Solution](#)

30. Oxidation number of iron $Na_2[Fe(CN)_5(NO^+)]$ is :

A. +2

B. +3

C. $+\frac{8}{3}$

D. None of these

Answer: a



Watch Video Solution

31. One mole of N_2H_4 loses ten moles of electrons to form a new compound A . Assuming that all the nitrogen appears in the new compound, what is the oxidation state of nitrogen in A ? (There is no change in the oxidation state of hydrogen.)

A. -1

B. -3

C. +3

D. +5

Answer: c



Watch Video Solution

32. The oxidation number of S in S_8 , S_2F_2 , and H_2S , respectively, are

A. 0, +1 and -2

B. +2, +1 and -2

C. 0, +1 and +2

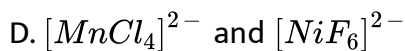
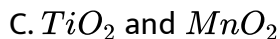
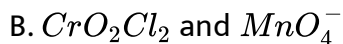
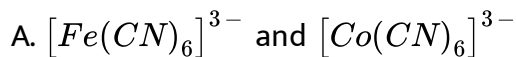
D. -2 , +1 and -2

Answer: a



Watch Video Solution

33. Among es the following, the pair having both the metals in their highest oxidation state is :

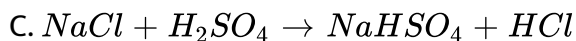
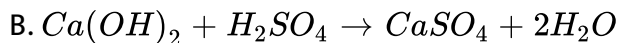
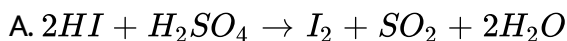


Answer: b



Watch Video Solution

34. Which of the following reaction depicts the oxidising behaviour of H_2SO_4 ?





Answer: a

 [Watch Video Solution](#)

35. The oxidation state of *Cr* in $[Cr(NH_3)_4Cl_2]^+$ is:

A. +3

B. +2

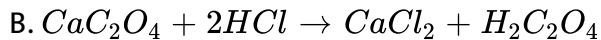
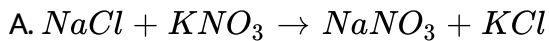
C. +1

D. 0

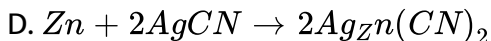
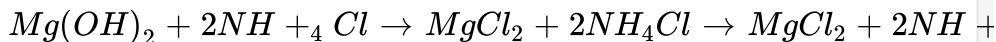
Answer: a

 [Watch Video Solution](#)

36. which of the following is a redox reaction ?



C.

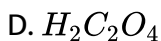
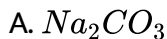


Answer: b



Watch Video Solution

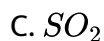
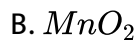
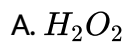
37. A substance which participates readily in both acid-base and oxidation-reduction reactions is:



Answer: d

 [Watch Video Solution](#)

38. Which of the following may act as an oxidizing and reducing agent ?



D. All of these

Answer: d

 [Watch Video Solution](#)

39. In compound HN_3 (hydrazoic acid) , oxidation state of N atoms are :

A. 0, 0, 3

B. 0, - 2, + 1

C. 1, 1, - 3

D. - 3, - 3, - 3

Answer: b

 [Watch Video Solution](#)

40. In the reaction $Ca + H_2 \rightarrow CaH_2$ select the incorrect statement.

A. Calcium undergoes oxidation

B. Hydrogen undergoes reduction

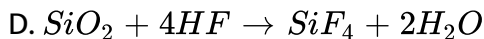
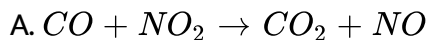
C. Calcium acts as oxidising agent

D. Hydrogen acts as oxidising agent

Answer: c

 [Watch Video Solution](#)

41. Which of the following is not a redox reaction ?



Answer: d

 [Watch Video Solution](#)

42. The oxidation states of the most electronegative elements in the products of the reaction between BaO_2 and H_2SO_4 are

A. 0 and -1

B. -1 and -2

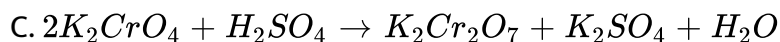
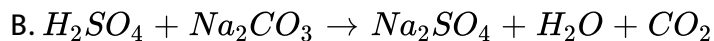
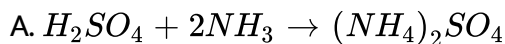
C. -2 and 0

D. -2 and +1

Answer: b

 [Watch Video Solution](#)

43. Which equation represents an oxidation-reduction reaction?



Answer: d

 [Watch Video Solution](#)

44. For which substance is the oxidation number of vanadium the same as that in the VO_3^- ion?

A. VN

B. VCl_3

C. $VOSO_4$

D. VF_5

Answer: d

 [Watch Video Solution](#)

45. A substance which participates readily in both acid-base and oxidation-reduction reactions is:

A. $NaCO_3$

B. KOH

C. $KMnO_4$

D. $H_2C_2O_4$

Answer: d

 [Watch Video Solution](#)

46. $P_4(s) + 3OH^-(aq)$. For this reaction the oxidizing and reducing agents are, respectively :

A. P_4 and OH^-

B. OH^- and P_4

C. P_4 and H_2O

D. P_4 and P_4

Answer: d

 [Watch Video Solution](#)

47. What is the average oxidation number of tungsten in the ion , $W_6O_6Cl_{12}^{2-}$?

A. 2.7

B. 3.3

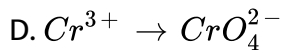
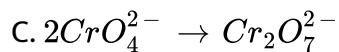
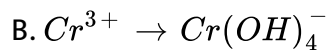
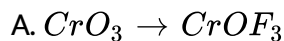
C. 3.7

D. 4.3

Answer: c

 [Watch Video Solution](#)

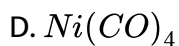
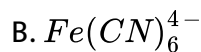
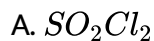
48. In which case does chromium undergo reduction?



Answer: a

 [Watch Video Solution](#)

49. In which species does the underlined elements have an oxidation number of +2?

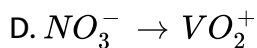
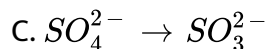
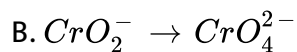
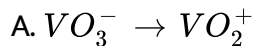


Answer: b



Watch Video Solution

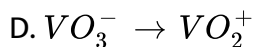
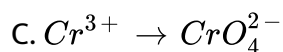
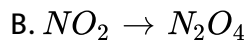
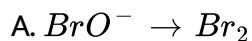
50. Which transformation is an oxidation?



Answer: b

 [Watch Video Solution](#)

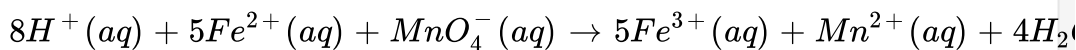
51. Which represents an oxidation ?



Answer: c

 [Watch Video Solution](#)

52. For the balanced equation :



Which statement is correct ?

- A. Fe^{2+} (aq) undergoes oxidation
- B. Fe^{2+} (aq) is the oxidizing agent
- C. H^+ (aq) undergoes oxidation
- D. H^+ (aq) is the oxidizing agent

Answer: a

 [Watch Video Solution](#)

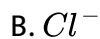
53. Which substance can act only as a reducing agent ?

- A. I_2
- B. $BrCl$
- C. $NaBr$
- D. HIO_4

Answer: c

 [Watch Video Solution](#)

54. Which species can act an oxidizing agent but not as a reducing agent ?



Answer: d



Watch Video Solution

55. What is the oxidation number of *Ti* in the compound $Na_2Ti_3O_7$?



D. +12

Answer: b

 [Watch Video Solution](#)

56. Which range includes the average oxidation state of S in $Na_2S_4O_6$?

A. Less than 0

B. 0 to +2

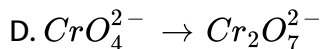
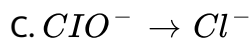
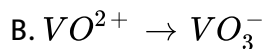
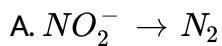
C. +2 to +4

D. Greater than +4

Answer: c

 [Watch Video Solution](#)

57. Which change represents an oxidation ?



Answer: b

 [Watch Video Solution](#)

58. What is the oxidation number of *Mo* in MoO_2Cl_2 ?

A. 0

B. +3

C. +5

D. +6

Answer: d

 [Watch Video Solution](#)

59. All of the reaction below represent oxidation-reduction processes except the : s

- A. combustion of tin n chlorine gas.
- B. decomposition of potasssium chlorate.
- C. neutralization of sodium hydrochloric acid.
- D. reaction of magnesium with hydrochloric atoms.

Answer: c



Watch Video Solution

60. In which pair of substances do the nitrogen atoms have the same oxidation state ?

A. HNO_3 and N_2O_5

B. NO and HNO_2

C. N_2 and N_2O

D. HNO_2 and HNO_3

Answer: a

 [Watch Video Solution](#)

61. In the equation below, which species acts the oxidation agent?



A. $Pb(s)$

B. $PbO_2(s)$

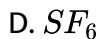
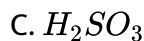
C. $H^+(aq)$

D. $HSO_4^-(aq)$

Answer: b

 [Watch Video Solution](#)

62. In which species does sulphur have the lowest oxidation state?



Answer: a



Watch Video Solution

63. What is the average oxidation state of copper in the superconductor



A. +2

B. +2.33

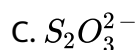
C. +2.67

D. +3

Answer: b

 Watch Video Solution

64. Which species has an atom with an oxidation number of +3?



Answer: a

 Watch Video Solution

65. What is the oxidation number of rhenium in $Ca(ReO_4)_2$?

A. +1

B. +3

C. +6

D. +7

Answer: d

 [Watch Video Solution](#)

66. When the half-reaction $NO_3^- \rightarrow NO$ is balanced for one NO_3^- in acid solution..... Electrons(s) is (are)..... .

A. 3 gained

B. 1gained

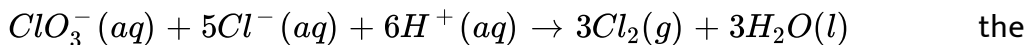
C. 1 lost

D. 3 lost

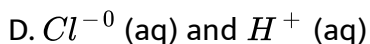
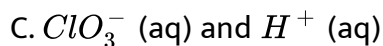
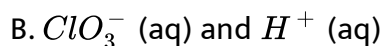
Answer: a

 [Watch Video Solution](#)

67. In the reaction



oxidizing and reducing agents are , respectively :



Answer: b

 [Watch Video Solution](#)

68. What is the oxidation number of C in formaldehyde, CH_2O ?

A. - 2

B. 0

C. +2

D. +4

Answer: b

 [Watch Video Solution](#)

69. Which one of the following cannot act as an oxidizing agent ?

A. S^{2-}

B. SO_3^{2-}

C. SO_4^{2-}

D. $S_2O_8^{2-}$

Answer: a

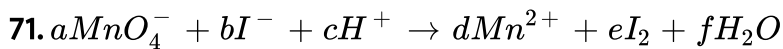
 [Watch Video Solution](#)

70. What is the oxidation number of As in the compound $K(NH_4)_2AsO_4 \cdot 6H_2O$?

- A. -3
- B. +1
- C. +3
- D. +5

Answer: d

 [Watch Video Solution](#)



In above balance reaction, value of $\left(\frac{c}{d}\right)$ will be :

- A. 1.3
- B. 1.2
- C. 8

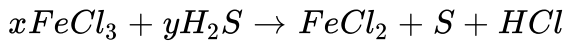
D. 5

Answer: c



Watch Video Solution

72. In the reaction,



A. $x = 2, y = 1$

B. $x = 3, y = 2$

C. $x = 4, y = 3$

D. $x = 2, y = 2$

Answer: a



Watch Video Solution

73. For the redox reaction $xP_4 + yHNO_3 \rightarrow H_3PO_4 + NO_2 + H_2O$

A. $x = 1, y = 5$

B. $x = 32, y = 10$

C. $x = 1, y = 20$

D. $x = 1, y = 15$

Answer: c



Watch Video Solution

74. In the reaction $xHI + yHNO_3 \rightarrow NO + I_2 + H_2O$

A. $x = 3, y = 2$

B. $x = 2, y = 3$

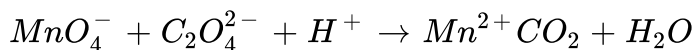
C. $x = 6, y = 2$

D. $x = 6, y = 1$

Answer: c

 [Watch Video Solution](#)

75. For the redox reaction



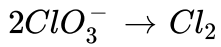
The correct stoichiometric coefficients of MnO_4^- , $\text{C}_2\text{O}_4^{2-}$ and H^+ respectively:

- A. 2, 5, 16
- B. 16, 5, 2
- C. 5, 16, 2
- D. 2, 16, 5

Answer: a

 [Watch Video Solution](#)

76. In the half reaction :



- A. 5 electrons are gained
- B. 5 electrons are liberated
- C. 10 electrons are gained
- D. 10 electrons are liberated

Answer: c



Watch Video Solution

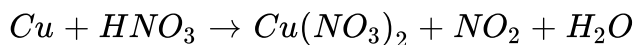
77. In the reaction $A^{-n_2} + xe^- \rightarrow A^{-n_1}$. Here, x will be :

- A. $n_1 + n_2$
- B. $n_2 - n_1$
- C. $n_1 - n_2$
- D. $n_1 \times n_2$

Answer: c

 [Watch Video Solution](#)

78. *Cu* reacts with HNO_3 according to the equation



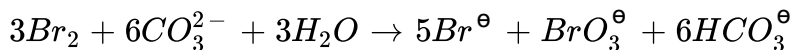
If NO and NO_2 are formed in a 2:3 ratio, what is the coefficient for Cu when the equation is balanced with the simplest whole numbers ?

- A. 2
- B. 3
- C. 6
- D. 9

Answer: d

 [Watch Video Solution](#)

79. In the reaction



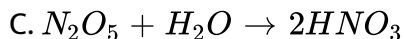
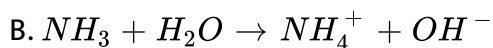
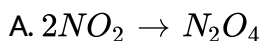
- A. Bromine is oxidized and the carbonate radical is reduced.
- B. Bromine is reduced and the carbonate radical is oxidized.
- C. Bromine is neither reduced nor oxidized .
- D. Bromine is both reduced and oxidzed.

Answer: d



Watch Video Solution

80. In which of the following reactions is there a change in the oxidation number of nitrogen atom?

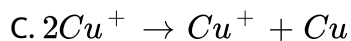
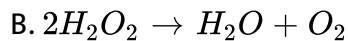
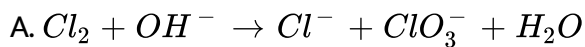


D. None of these

Answer: d

 Watch Video Solution

81. Which reaction does not represent auto redox or disproportionation?



Answer: d

 Watch Video Solution

82. In the reaction $X^- + XO_3^- + H^+ \rightarrow X_2 + H_2O$, the molar ratio in which X^- and XO_3^- react is :

A. 1:5

B. 5:1

C. 2:3

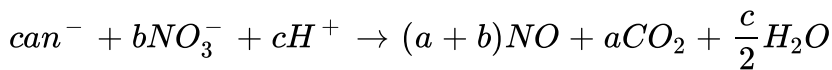
D. 3:2

Answer: b



Watch Video Solution

83. CN^- is oxidised by NO_3^- in presence of acid :



What are the values of a, b, c in that order:

A. 3, 7, 7

B. 3, 10, 7

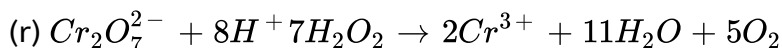
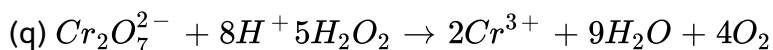
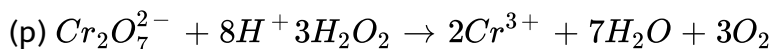
C. 3, 10, 10

D. 3, 7, 10

Answer: d

 [Watch Video Solution](#)

84. The following equations are balanced atomwise and chargewise.



The precise equation/equations representing the oxidation of H_2O_2 is/are:

A. (P) only

B. (Q) only

C. (R) only

D. all the three

Answer: a

 [Watch Video Solution](#)

85. During the disproportionation of I_2 to iodide and iodate ions, the ratio of iodate and iodide ions formed in alkaline medium is

A. 1 : 5

B. 5 : 1

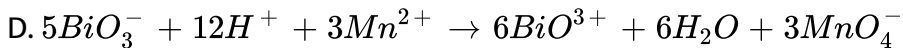
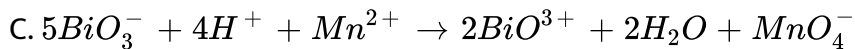
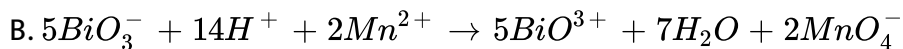
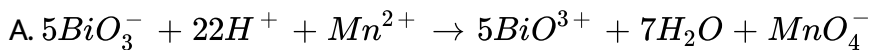
C. 3 : 1

D. 1 : 3

Answer: a

 [Watch Video Solution](#)

86. Which of the following equation is correctly balanced ?

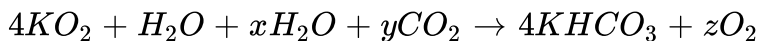


Answer: b



Watch Video Solution

87. The values of x, y and z in the reaction are respectively:



A. 3, 6, 6

B. 2, 4, 3

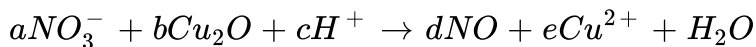
C. 3, 2, 5

D. 4, 3, 6

Answer: b

 [Watch Video Solution](#)

88. For the balanced redox reaction:



where a, b, c, d and e are stoichiometric coefficients if 'c' is 14, then the value of 'e' is :

A. 2

B. 3

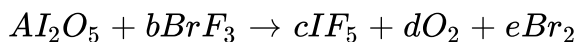
C. 6

D. 7

Answer: c

 [Watch Video Solution](#)

89. Consider the balanced chemical reaction:



Calculate the value of $(b+c+e)/(a)$.

A. 10

B. 7

C. 6

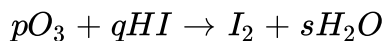
D. 3

Answer: b



[Watch Video Solution](#)

90. What are the value of p , q , r and s for the following reaction ?



A. 1, 6, 3, 1

B. 1, 6, 3, 3

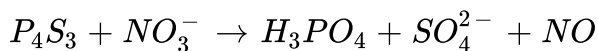
C. 1, 6, 6, 3

D. 1, 6, 3, 6

Answer: b

 [Watch Video Solution](#)

91. The unbalanced equation for the reaction of P_4S_3 with nitrate in aqueous acidic medium is given below :



the number of moles of water required per mole of P_4S_3 is :

A. 18

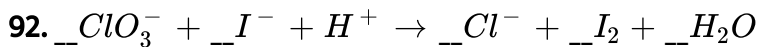
B. $\frac{8}{3}$

C. 8

D. 28

Answer: b

 [Watch Video Solution](#)



When this equation is balanced with whole number coefficients, what is the H^+ / I_2 coefficient ratio ?

A. $\frac{2}{1}$

B. $\frac{3}{1}$

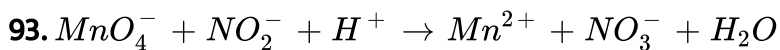
C. $\frac{6}{1}$

D. Some other ratio

Answer: a



Watch Video Solution



When this equation is balanced correctly this equation is balanced with the smallest integer coefficients ?

A. 1

B. 6

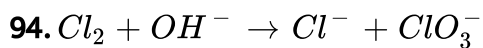
C. 8

D. 16

Answer: b



Watch Video Solution



What is the coefficient for OH^- when this equation is balanced with the smallest interger coefficients ?

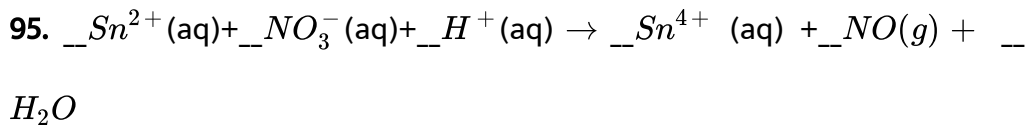
A. 2

B. 3

C. 4

D. 6

Answer: d

[Watch Video Solution](#)

What is the coefficient for $H^+(aq)$ when the equation above is balanced correctly with the smallest interger coefficients?

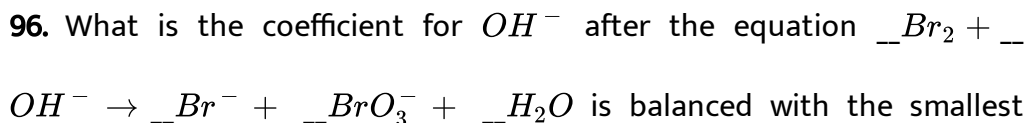
A. 2

B. 4

C. 6

D. 8

Answer: d

[Watch Video Solution](#)

integer coefficients ?

A. 3

B. 6

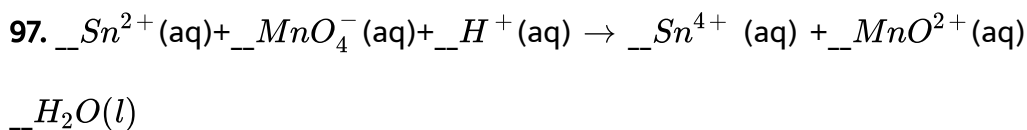
C. 12

D. 18

Answer: b



Watch Video Solution



When this equation for the reaction of $Sn^{2+}(aq)$ and $MnO_4^-(aq)$ is balanced correctly, what is the ratio, Sn^{2+} / MnO_4^- ?

A. $\frac{1}{1}$

B. $\frac{1}{2}$

C. $\frac{2}{1}$

D. $\frac{5}{2}$

Answer: d



[Watch Video Solution](#)

98. What is the coefficient for H^+ when the half equation is balanced with the smallest whole number coefficients?

A. 2

B. 4

C. 6

D. 8

Answer: b



[Watch Video Solution](#)

99. When the reaction: $Cl^- + ClO_3^- \rightarrow Cl_2 + H_2O$ is balanced in acid solution what is the ratio of Cl^- to ClO_3^- ?

A. $\frac{1}{1}$

B. $\frac{2}{1}$

C. $\frac{3}{1}$

D. $\frac{5}{1}$

Answer: d



Watch Video Solution

100. What is the coefficient for O_2 when the equation $NH_3 + O_2 \rightarrow NO + H_2O$ is balanced with smallest whole number coefficients ?

A. 2

B. 3

C. 4

D. 8

Answer: d

 [Watch Video Solution](#)

101. When the equation $\text{Sn}^{2+}(\text{aq}) + \text{IO}_3^-(\text{aq}) + \text{H}^+(\text{aq}) \rightarrow \text{Sn}^{4+}(\text{aq}) + \text{I}_2(\text{aq}) + \text{H}_2\text{O}(\text{l})$ is balanced, what is the $\text{Sn}^{2+}(\text{aq}) / \text{IO}_3^-(\text{aq})$ mole ratio?

A. $\frac{1}{1}$

B. $\frac{2}{1}$

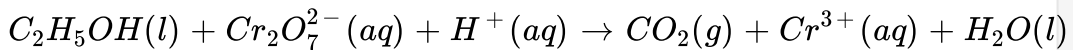
C. $\frac{1}{2}$

D. $\frac{5}{2}$

Answer: d

 [Watch Video Solution](#)

102. Ethanol reacts with dichromate ion in acid solution according to the equation:



What is the coefficient for $H^+(aq)$ when this equation is balanced with the smallest whole number coefficients?

A. 10

B. 12

C. 14

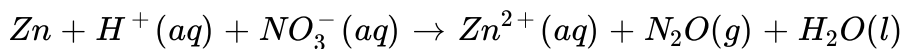
D. 16

Answer: d



Watch Video Solution

103. What is the coefficient for Zn when the equation below is balanced with the smallest whole number coefficient?



A. 2

B. 4

C. 6

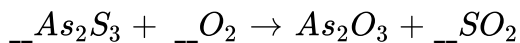
D. 8

Answer: b



[Watch Video Solution](#)

104. What is the coefficient for O_2 when the following reaction



is correctly balanced with the smallest integer coefficient

A. 5

B. 6

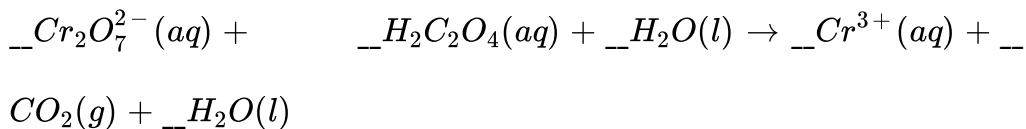
C. 8

D. 9

Answer: d

 Watch Video Solution

105. When the equation below is balanced correctly using the simplest whole number coefficients, what is the coefficient for $CO_2(g)$?



A. 4

B. 6

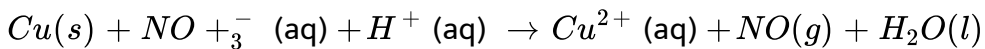
C. 8

D. 12

Answer: b

 Watch Video Solution

106. How many H^+ ions are required when the equation below is balanced with the smallest whole number coefficients?



A. 2

B. 4

C. 6

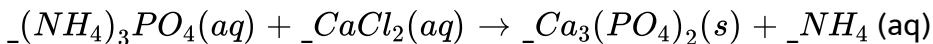
D. 8

Answer: d



Watch Video Solution

107. When this equation is balanced using the smallest possible integers, what is the sum of the coefficients?



A. 8

B. 9

C. 11

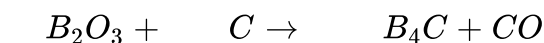
D. 12

Answer: d



Watch Video Solution

108. Born carbide, B_4C , is made by the high temperature reaction of boron oxide with graphite, yielding carbon monoxide as a by-product



What is the total of the smallest coefficients for the reactants and products in the balanced equation?

A. 9

B. 10

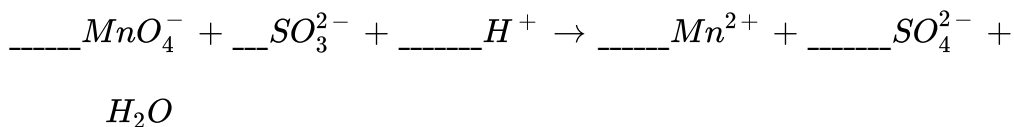
C. 15

D. 16

Answer: d

 [Watch Video Solution](#)

109. When the equation



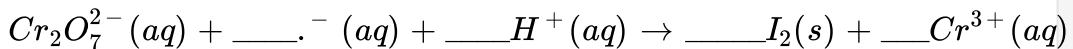
is balanced correctly with the smallest whole number coefficients, what is the coefficient for H_2O ?

- A. 3
- B. 5
- C. 8
- D. 10

Answer: a

 [Watch Video Solution](#)

110. What is the coefficients of I_2 (s) when the reaction below is balanced with smallest whole number coefficients?



A. 2

B. 3

C. 4

D. 6

Answer: b



Watch Video Solution

111. The following redox reaction occurs in basic medium $NO_3^- Zn(s) \rightarrow Zn^{2+} + NH_4^+$ when the above reaction is balanced such that the stoichiometric coefficients are in smallest whole number

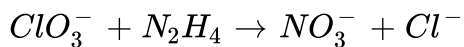
ratio, then the difference of stoichiometric coefficient of Zn (s) and OH^- ion will be:

- A. 4
- B. 10
- C. 6
- D. None of these

Answer: c

 [Watch Video Solution](#)

112. Ratio of stoichiometric coefficient of N_2H_4 to Cl^- in the following reaction:



- A. $\frac{8}{15}$
- B. 1
- C. $\frac{2}{3}$

D. $\frac{6}{14}$

Answer: d



Watch Video Solution

113. What is the atomic mass of a metal whose specific heat capacity $\frac{1}{9}$ cal/
 $gm^{\circ}C$ and whose percentage by mass in its superoxide is 36%?

A. 57.6

B. 54

C. 36

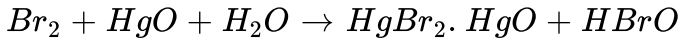
D. 64

Answer: a



Watch Video Solution

114. Equivalent weight of Br_2 in the following reaction is



(given $Br = 80$)

A. $\frac{160}{3}$

B. 80

C. 160

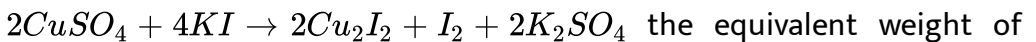
D. 160×3

Answer: c



[Watch Video Solution](#)

115. In the reaction



$CuSO_4$ will be:

A. 31.75

B. 63.5

C. 127

D. 15.88

Answer: b



[Watch Video Solution](#)

116. In the following reaction hydrazine is oxidized N_2

$N_2H_4 + OH^- \rightarrow N_2 + H_2O + e$ The equivalent weight of N_2H_4 (hydrazine) is:

A. 8

B. 16

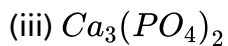
C. 32

D. 64

Answer: a



117. Determine the equivalent weight of each given below, if formula weight of these compounds are X , Y and Z respectively:



A. (I). $\frac{X}{2}$

(II). $\frac{Y}{3}$

(III). $\frac{Z}{6}$

B. (I). X

(II). $\frac{Y}{3}$

(III). $\frac{Z}{3}$

C. (I). $\frac{X}{2}$

(II). $\frac{Z}{3}$

(III). $\frac{Z}{3}$

D. (I)X,(II) Y,(III)Z

Answer: a



Watch Video Solution

118. When one mole NO_3^- is converted into 1 mole NO_2 0.5 mole N_2 and 0.5 mole N_2O respectively, accepts x,y and z mole of reaction -x,y,z are respectively.

A. 1,5,4

B. 1,2,3

C. 2,1,3

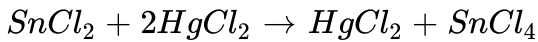
D. 2,3,4

Answer: a



Watch Video Solution

119. In the equation,



The equivalent weight of stannous chloride (molecular weight = 190) will be :

- A. 190
- B. 95
- C. 47.5
- D. 154.5

Answer: b

 [Watch Video Solution](#)

120. In the following reaction:

$3\text{Fe} + 4\text{H}_2\text{O} \rightarrow \text{Fe}_3\text{O}_4 + 4\text{H}_2$, if the atomic weight of iron is 56, then its equivalent weight will be

A. 42

B. 21

C. 63

D. 84

Answer: b

 [Watch Video Solution](#)

121. Which of the following statements is corrected about equivalent weight of $KMnO_4$?

A. Equivalent weight is $\frac{1}{3}$ of molecular mass in neutral and weak basic medium

B. Equivalent weight is $\frac{1}{5}$ of molecular mass in basic medium

C. Equivalent weight is equal to molecular mass in acidic medium

D. Equivalent weight is $\frac{1}{3}$ of molecular mass in acidic medium

Answer: a



Watch Video Solution

122. Equivalent weight of NH_3 in the change

$N_2 \rightarrow NH_3$ is :

A. $\frac{17}{6}$

B. 17

C. $\frac{17}{2}$

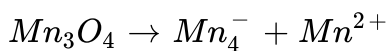
D. $\frac{17}{3}$

Answer: d



Watch Video Solution

123. If M represents molecular mass of Mn_3O_2 then what will be its equivalent mass if it undergoes disproportionation reaction as shown:



A. $\frac{M}{13}$

B. $\frac{M}{2}$

C. $\frac{15M}{26}$

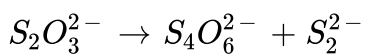
D. $\frac{26M}{15}$

Answer: c



Watch Video Solution

124. What is the equivalent mass of $\text{S}_2\text{O}_3^{2-}$ ion as per the following disproportionation reaction.



Where the charge above species represents charge on the ion and not oxidation state?

A. 132

B. 22

C. 130.6

D. 113.15

Answer: c

 [Watch Video Solution](#)

125. The equivalent mass of $MnSO_4$ is half its molecular mass when it is converted to

A. Mn_2O_3

B. MnO_2

C. MnO_4^-

D. MnO_4^{2-}

Answer: b

 [Watch Video Solution](#)

126. When $KMnO_4$ acts as an oxidising agent and ultimately forms MnO_4^{2-} , MnO_2 , Mn_2O_3 , and Mn^{2+} , then the number of electrons transferred in each case, respectively, are

A. 4, 3, 1, 5

B. 1, 5, 3, 7

C. 1, 3, 4, 5

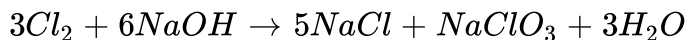
D. 3, 5, 7, 1

Answer: c



Watch Video Solution

127. Equivalent weight of chlorine molecule in the equation is :



A. 42.6

B. 35.5

C. 59.1

D. 71

Answer: a



Watch Video Solution

128. In the reaction:

$Na_2S_2O_3 + 4Cl_2 + 5H_2O \rightarrow Na_2SO_4 + H_2SO_4 + 8HCl$, the
equivalent weight of $Na_2S_2O_3$ will be: (M= molecular weight of
 $Na_2S_2O_3$)

A. $\frac{M}{4}$

B. $\frac{M}{8}$

C. $\frac{M}{1}$

D. $\frac{M}{2}$

Answer: b



Watch Video Solution

129. X gm of metal gave Y gm of its oxide, so equivalent mass of metal is :

A. $\left(\frac{X}{Y - X}\right) \times 8$

B. $\left(\frac{Y - X}{X}\right) \times 8$

C. $\left(\frac{Y + X}{X}\right) \times 8$

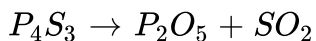
D. $\frac{X}{Y} \times 8$

Answer: a



Watch Video Solution

130. In the following conversion of sulphide of phosphorous



Equivalent weight of P_4S_3 (molecular weight=M) is :

A. $\frac{M}{14}$

B. $\frac{M}{18}$

C. $\frac{M}{32}$

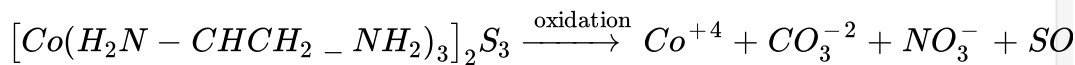
D. $\frac{M}{38}$

Answer: c



Watch Video Solution

131.



What is the equivalent weight of the reactant in the above reaction?

A. $\frac{3M}{182}$

B. $\frac{M}{182}$

C. $\frac{11M}{182}$

D. $\frac{7M}{182}$

Answer: b

132. 3.65gm equimole mixture of $NaOH$ and Na_2CO_3 is titrated against $0.1M HCl$ using phenolphthalein as an indicator, $V_1 mL$ of acid was required to reach end point. In another experiment $3.65gm$ of same mixture is titrated against $0.2M HCl$ using methyl orange as an indicator, $V_2 mL$ of acid was required to reach end point. $V_1 + V_2$ is :

- A. 875mL
- B. 750mL
- C. 500mL
- D. 1000mL

Answer: a

133. How many millilitres of a $9N H_2SO_4$ solution will be required to neutralize completely $20mL$ of a $3.6N NaOH$ solution?

- A. $18.0mL$
- B. $8.0mL$
- C. $16.0mL$
- D. $80.0mL$

Answer: b



Watch Video Solution

134. What is the normality of the H_2SO_4 solution, $18.6mL$ of which \neq neutralizes $30.0mL$ of a $1.5N KOH$ solution

- A. $5.0N$
- B. $1.25N$
- C. $2.5N$

D. 3.5N

Answer: c



Watch Video Solution

135. 50ml of 5.6 % KOH (w/v) is added to 50mL of a 5.6 % HCl (w/n) solution. The resulting solution will be :

- A. neutral
- B. alkaline
- C. strongly alkaline
- D. acidic

Answer: d



Watch Video Solution

136. Calculate the normality of an $NaOH$ solution, 21.5mL of which is required 0.240g of NaH_2PO_4 in a solution to monohydrogen phosphate.

- A. 1.093N
- B. 0.093N
- C. 0.048N
- D. 0.93N

Answer: b



Watch Video Solution

137. 2.00g of a mixture of $NaHCO_3$ and $KClO_3$ present in the mixture is :

- A. 0.84g
- B. 1.84g
- C. 1.16g

D. 0.16g

Answer: c

 [Watch Video Solution](#)

138. A 25mL HCl solution containing 3.65g HCl/L is neutralized by 50mL of NaOH solution. Again, 25mL of an H_2SO_4 solution of unknown strength.

The normality of the H_2SO_4 solution is :

A. 0.25N

B. 0.025N

C. 0.05N

D. 0.05N

Answer: b

 [Watch Video Solution](#)

139. 10mL of 0.5N HCl, 30mL of 0.1N HNO_3 and 75mL of 0.1M H_2SO_4 are mixed together. The normality of the resulting solution will be :

A. 0.2N

B. 0.1N

C. 0.4N

D. 0.5N

Answer: a



Watch Video Solution

140. The amount of $KMnO_4$ required to prepare 100mL of a 0.1N solution in an acidic medium is :

A. 3.16g

B. 1.58g

C. 0.316g

D. 31.6g

Answer: c

 [Watch Video Solution](#)

141. 0.185g of an iron wire containing 99.8 % iron is dissolved in an acid to form ferrous ions. The solution requires 33mL of $K_2Cr_2O_7$ solution for complete reaction. The normality of the $K_2Cr_2O_7$ solution is :

A. 0.05

B. 0.20

C. 0.02

D. 0.10

Answer: d

 [Watch Video Solution](#)

142. 8.7gm of pyrolusite (impure MnO_2) were heated with concentrated HCl. The Cl_2 gas evolved was passed through excess of KI solution. The iodine gas evolved required 80ml of $\frac{N}{10}$ hypo solution.

The percentage of MnO_2 in pyrolusite will be : [$Mn = 55$]

A. 0.04

B. 0.4

C. 0.08

D. 0.8

Answer: a



Watch Video Solution

143. Volume of 0.1M ferrous oxalate solution required to react completely with 60ml of 0.1N acidified $KMnO_4$ solution

A. 30mL

B. 20mL

C. 150mL

D. 10mL

Answer: b



Watch Video Solution

144. An equimolar mixture of $Na_2C_2O_4$ and $KHC_2O_4 \cdot 3H_2C_2O_4$ required V_1 litre of $0.1M KMnO_4$ in acidic medium for complete oxidation. The same amount of mixture required V_2 litre of $0.2M NaOH$ for complete neutralization. What is the ratio of $V_1 : V_2$?

A. 4 : 7

B. 10 : 7

C. 8 : 7

D. 2 : 7

Answer: a



Watch Video Solution

145. What volume of $O_2(g)$ measured at 1 atm and 273K will be formed by action of 200mL of 0.4M $KMnO_4$ of hydrogen peroxide in acidic solution /

- A. 4.48 litre
- B. 2.24 litre
- C. 8.96 litre
- D. 1.12 litre

Answer: a

[Watch Video Solution](#)

146. 10 moles of $KMnO_4$ were consumed in each separate titration with oxalic acid, one in presence of H_2SO_4 and other in presence of HCl. Identify the correct option.

- A. 25 moles of oxalic acid will be consumed in both cases.
- B. 25 moles of oxalic acid will be consumed in with H_2SO_4 and with HCl more than 25 moles of oxalic acid will be consumed.
- C. No oxalic acid will be consumed in case of HCl and less than 25 moles will be consumed in case of H_2SO_4
- D. 25 moles of oxalic acid will be consumed with H_2SO_4 and less than 25 moles of oxalic acid will be consumed with HCl

Answer: d

 [Watch Video Solution](#)

147. 100mL each of $1NH_2O_2$ and $11.2VH_2O_2$ solution are mixed, then the final solution is equivalent to:

(Assume 1 mole of an ideal gas occupies 22.4L at STP)

- A. $3MH_2O_2$ solution
- B. $0.5NH_2O_2$ solution

C. $34g / LH_2O_2$ solution

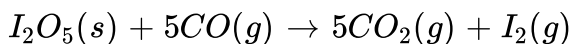
D. $2.55g / LH_2O_2$ solution

Answer: c



Watch Video Solution

148. The CO in a 20.3L sample of gas was converted to CO_2 by passing the gas over iodine pentoxide heated to $150^\circ C$:



The iodine distilled at this temperature and was collected in an absorber containing 8.25mL of $0.11101MNa_2S_2O_3$. The excess hypo was back-titrated with 2.16mL of $0.00947MI_2$ solution. The milligrams of CO in 1L of the original gas sample was therefore:

A. 0.172mg

B. 0.283mg

C. 0.349mg

D. 0.506mg

Answer: a

 [Watch Video Solution](#)

149. Bleaching powder and bleach solution are produced on a large scale and used in several household products. The effectiveness of bleach solution is often measured by iodometry.

25mL of household bleach solution was mixed with 30mL of 0.50M KI and 10mL of 4N acetic acid. In the titration of the liberated iodine, 48mL of $0.25\text{N Na}_2\text{S}_2\text{O}_3$ was used to reach the end point. The molarity of the household bleach solution is :

A. 0.48M

B. 0.96M

C. 0.24M

D. 0.024M

Answer: c

 [Watch Video Solution](#)

150. The number of moles of oxalate ions oxidised by one mole of MnO_4^- ion in acidic medium is :

A. $\frac{5}{2}$

B. $\frac{2}{5}$

C. $\frac{3}{5}$

D. $\frac{5}{3}$

Answer: d

 [Watch Video Solution](#)

151. How many moles of $KMnO_4$ are needed to oxidise a mixture of 1 mole of each $FeSO_4$ & FeC_2O_4 in acidic medium :

A. $\frac{4}{5}$

B. $\frac{5}{4}$

C. $\frac{3}{4}$

D. $\frac{5}{3}$

Answer: a



Watch Video Solution

152. An aqueous solution containing 0.10 g KIO_3 (formula weight = 214.0) was treated with an excess of KI solution the solution was acidified with HCl. The liberated I_2 consumed 45.0 mL of " thiosulphate solution to decolourise the blue starch-iodine complex. Calculate the molarity of the sodium thosulphate solution.

A. 0.0623M

B. 0.0313M

C. 0.126M

D. 0.252M

Answer: a



[Watch Video Solution](#)

153. When N_2 is converted into NH_3 , the equivalent weight of nitrogen will be:

A. 1.67

B. 2.67

C. 2.63

D. 4.67

Answer: d



[Watch Video Solution](#)

154. In the conversion $NH_2OH \rightarrow N_2O$, the equivalent weight of NH_2OH will be:

A. $\frac{M}{4}$

B. $\frac{M}{2}$

C. $\frac{M}{5}$

D. $\frac{M}{1}$

Answer: b



Watch Video Solution

155. Which of the following relations is incorrect for solutions?

A. $3NAl_2(SO_4)_3 = 0.5MAl_2(SO_4)_3$

B. $3MH_2SO_4 = 6NH_2SO_4$

C. $1MH_3PO_4 = 1/3NH_3PO_4$

D. $1MAl_2(SO_4)_3 + 6NAl_2(SO_4)_3$

Answer: c

 [Watch Video Solution](#)

156. How many millilitres of complete reaction with a solution containing $0.125g$ of pure Na_2CO_3 :

A. $23.6mL$

B. $25.6mL$

C. $26.3mL$

D. $32.6mL$

Answer: a

 [Watch Video Solution](#)

157. If $25mL$ of a H_2SO_4 solution reacts completely with $1.06g$ of pure Na_2CO_3 , what is the normality of this acid solution :

A. 1N

B. 0.5N

C. 1.8N

D. 0.8N

Answer: d



Watch Video Solution

158. The mass of oxalic acid crystals ($H_2C_2O_4 \cdot 2H_2O$) required to prepare 50 mL of a 0.2 N solution is:

A. 4.5g

B. 6.3g

C. 0.63g

D. 0.45g

Answer: c

 [Watch Video Solution](#)

159. 125mL of 63% (w/v) $H_2C_2O_4 \cdot 2H_2O$ solution is made to react with 125mL of a 40% (w/v) $NaOH$ solution. The resulting solution is :
(ignoring hydrolysis of ions)

- A. neutral
- B. acidic
- C. strongly acidic
- D. alkaline

Answer: a

 [Watch Video Solution](#)

160. A certain weight of pure $CaCO_3$ is made to react completely with 200mL of a HCl solution to give 227mL of CO_2 gas at STP. The normality of the HCl solution is :

A. $0.05N$

B. $0.1N$

C. $1.0N$

D. $0.2N$

Answer: b



Watch Video Solution

161. Volume $V_1 mL$ of $0.1 M K_2Cr_2O_7$ is needed for complete oxidation of $0.678g N_2H_4$ in acidic medium. The volume of $0.3M KMnO_4$ needed for same oxidation in acidic medium will be :

A. $\frac{2}{5}V_1$

B. $\frac{5}{2}V_1$

C. $113VV_1$

D. can not be determind

Answer: a

 [Watch Video Solution](#)

162. Which of the following solutions will exactly oxidize 25mL of an acid solution of 0.1MFe (II) oxalate?

A. 25mL of 0.1MKMnO_4

B. 25mL of 0.2MKMnO_4

C. 25mL of 0.6MKMnO_4

D. 15mL of 0.1MKMnO_4

Answer: d

 [Watch Video Solution](#)

163. An element A in a compound ABD has oxidation number A^{n-} . It is oxidised by $Cr_2O_7^{2-}$ in acid medium. In the experiment 1.68×10^{-3}

moles of $K_2Cr_2O_7$ were used for 3.26×10^{-3} moles of ABD . The new oxidation number of A after oxidation is:

- A. 3
- B. $3-n$
- C. $n-3$
- D. $+n$

Answer: b



[Watch Video Solution](#)

164. A mixture of 0.02 mole of $KBrO_3$ and 0.001 mole of KBr was treated with excess of KI and acidified. The volume of 0.01M $Na_2S_2O_3$ solution required to consume the liberated iodine will be :

- A. 1000mL
- B. 1200mL
- C. 1500mL

D. 800mL

Answer: b

 [Watch Video Solution](#)

165. $Hg_5(IO_6)_2$ oxidizes KI to I_2 in acid medium and the other product containing iodine is K_2HgI_4 . If the I_2 liberated in the number of moles of $Hg_5(IO_6)_2$ that have reacted is :

A. 10^{-3}

B. 10^{-4}

C. 2.5×10^{-4}

D. 2.5×10^{-2}

Answer: c

 [Watch Video Solution](#)

166. The normality of $0.3M$ phosphorous acid H_3PO_3 is:

A. 0.1

B. 0.9

C. 0.3

D. 0.6

Answer: d



Watch Video Solution

167. An aqueous solution of $6.3g$ oxalic acid dihydrate is made up to $250mL$. The volume of $0.1N NaOH$ required to completely neutralise $10mL$ of this solution is

A. 40mL

B. 20mL

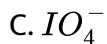
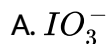
C. 10mL

D. 4mL

Answer: a

 Watch Video Solution

168. When I^\ominus is oxidised by MnO_4^\ominus in an alkaline medium, I^\ominus converts into



Answer: a

 Watch Video Solution

169. The amount of wet NaOH containing 15% water required to prepare 70 liters of 0.5 N solution is:

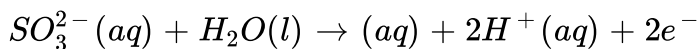
- A. 1.65kg
- B. 1.4kg
- C. 16.5kg
- D. 140kg

Answer: a



Watch Video Solution

170. 50mL of 0.1M solution of a salt reacted with 25mL of 0.1M solution of sodium sulphite. The half reaction for the oxidation of sulphite ion is:



If the oxidation number of metal in the salt was 3, what would be the new oxidation number of metal:

A. 0

B. 1

C. 2

D. 4

Answer: c

 [Watch Video Solution](#)

171. HNO_3 oxidises NH_4^+ ions to nitrogen and itself gets reduced to NO_2 . The moles of HNO_3 required by 1 mole of $(NH_4)_2SO_4$ is:

A. 4

B. 5

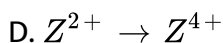
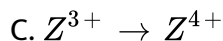
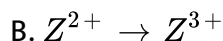
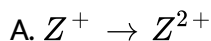
C. 6

D. 2

Answer: c

 [Watch Video Solution](#)

172. 25ml of a $0.1(M)$ solution of a stable cation of transition metal Z reacts exactly with 25ml of $0.04(M)$ acidified $KMnO_4$ solution. Which of the following is most likely to represent the change in oxidation state of Z correctly?



Answer: d

 [Watch Video Solution](#)

173. How many litres of Cl_2 at STP will be liberated by the oxidation of $NaCl$ with $10gKMnO_4$ in acidic medium: (Atomic weight:

$Mn = 55$ and $K = 39$)

A. 3.59

B. 7.08

C. 1.77

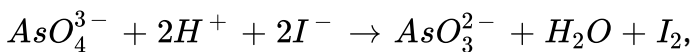
D. None of these

Answer: a



[Watch Video Solution](#)

174. One gram of Na_3AsO_4 is boiled with excess of solid KI in presence of strong HCl . The iodine evolved is absorbed in KI solution and titrated against $0.2N$ hyposolution. Assuming the reaction to be



calculate the volume of arsenate consumed. [Atomic weight of $As = 75$]

A. 48.1mL

B. 38.4mL

C. 24.7mL

D. 30.3mL

Answer: a

 [Watch Video Solution](#)

175. What happens when a solution of potassium chromate is treated with an excess of dil. Nitric acid?

A. Cr reduces in the oxidation state + 3 from CrO_4^{-2}

B. Cr oxidizes in the oxidation state + 7 from CrO_4^{2-}

C. Cr^{+3} and $Cr_2O_7^{2-}$ will be formed

D. $Cr_2O_7^{2-}$ and H_2O will be formed

Answer: d

 [Watch Video Solution](#)

176. The oxidation state of chromium in the final product formed in the reaction between KI and acidified potassium dichromate solution is

A. +4

B. +6

C. +2

D. +3

Answer: d



Watch Video Solution

177. Consider a titration of potassium dichromate solution with acidified Mohr's salt solution using diphenylamine as indicator. The number of moles of Mohr's salt required per mole of dichromate is:

A. 3

B. 4

C. 5

D. 6

Answer: d

 [Watch Video Solution](#)

178. Dichloroacetic acid ($CHCl_2COOH$) is oxidised to CO_2 , H_2O and Cl_2 by 600meq of an oxidising agent. Same amount of ammonia to form ammonium dichloroacetate:

A. 0.0167

B. 0.1

C. 0.3

D. 0.6

Answer: b

 [Watch Video Solution](#)

179. 20ml of H_2O_2 after acidification with dilute H_2SO_4 required 30ml of $\frac{N}{12} KMnO_4$ for complete oxidation. The approximate strength of H_2O_2 solution (ing/L) is : [Molar mass of $H_2O_2 = 34$]

A. 2g / L

B. 4g / L

C. 8g / L

D. 6g / L

Answer: a



Watch Video Solution

180. What will be the volume strength of 100mL of $KMnO_4$ in acidic medium? (Given that 61mL of $KMnO_4$ reacts completely with 5mL of $1MK_4[Fe(CN)_6]$ where it converts into K^+ , Fe^{3+} , CO_3^{2-} and NO_3^-)

A. 17.31 V

B. 34.62 V

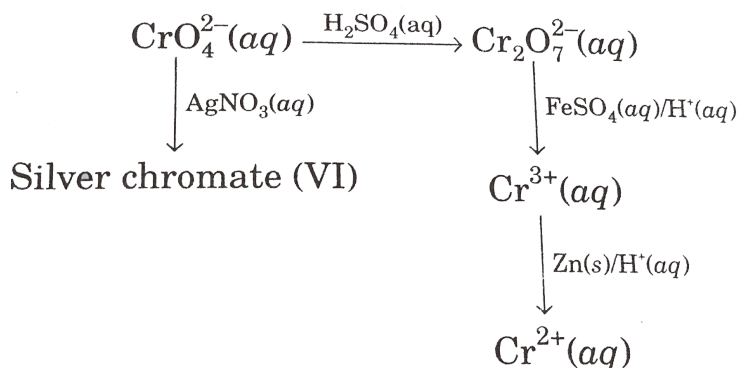
C. 18.8 V

D. 19.8 V

Answer: a

 [View Text Solution](#)

181. Consider the reactions shown below :



Which of the following statements is false?

A. Silver chromate (VI) has the formula Ag_2CrO_4 .

B. The minimum mass of zinc required to reduce 0.1 mole of

Cr^{3+} to Cr^{2+} is 6.54g

C. The conversion of CrO_4^{2-} into $Cr_2O_7^{2-}$ is not a redox reaction .

D. The _____ equation

$Cr_2O_7^{2-} + 14H^+ + 6Fe^{2+} \rightarrow 6Fe^{3+} + 2Cr^{3+} + 7H_2O$ correctly

describes the reduction of $Cr_2O_7^{2-}$ by acidified $FeSO_4$.

Answer: b

 [Watch Video Solution](#)

182. 0.7g of $(NH_4)_2SO_4$ sample was boiled with 100mL of 0.2 N NaOH solution was diluted to 250 ml. 25mL of this solution was neutralised using 10mL of a 0.1 N H_2SO_4 solution. The percentage purity of the $(NH_4)_2SO_4$ sample is :

A. 94.3

B. 50.8

C. 47.4

D. 79.8

Answer: a



Watch Video Solution

183. A mixture solution of KOH and Na_2CO_3 requires 15 mL of $\frac{N}{20}$ HCl when titrated with phenolphthalein as indicator. But the same amount of the solution when titrated with methyl orange as indicator requires 25 mL of the same acid. Calculate the amount of KOH and Na_2CO_3 present in the solution.

A. 0.014g

B. 0.14g

C. 0.028g

D. 1.4g

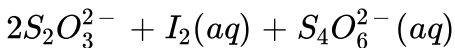
Answer: a



Watch Video Solution

184. The percentage of copper in copper (II) salt can be determined by using a thiosulphate titration. A $0.305g$ of copper (II) salt was dissolved in water and added to an excess of potassium iodide solution liberating iodine according to the following equation:

$2Cu^{2+}(aq) + 4I^{-}(aq) \rightarrow 2Cu_{\underline{s}} + I_2(aq)$ The iodine liberated required $24.5cm^3$ of a $0.1 \text{ mole } dm^{-3}$ solution of sodium thiosulphate for titration according to reaction:



The percentage of copper by mass in the copper (II) salt is (Atomic mass of copper =63.5)

A. 64.2

B. 51

C. 48.4

Answer: b



185. When the permanganate ion, MnO_4^- , acts as an oxidizing agent it forms different products depending on the Ph of the solution. Which species correspond to the conditions listed?

	Acidic	Basic	Neutral
A	Mn^{2+}	$Mn(OH)_2$	MnO_2
B	Mn^{2+}	MnO_4^{2-}	MnO_2
C	MnO_2	MnO_4^{2-}	$Mn(OH)_2$
D	Mn^{2+}	$Mn(OH)_2$	MnO_4^{2-}

A. A

B. B

C. C

D. D

Answer: b

 [Watch Video Solution](#)

186. 10 mL of 1 N HCl is mixed with 20 mL of 1M H_2SO_4 and 30 mL of 1M NaOH. The resultant solution has:

- A. 20meq of H^+ ions
- B. 20meq of OH^-
- C. 0meq of H^+ or OH^-
- D. 30 mili moles of H^+

Answer: a

 [Watch Video Solution](#)

187. Which of the following statements are incorrect ?

- A. 0.2 moles of $KMnO_4$ will oxidise one mole of ferrous ions to ferric ions in acidic medium.
- B. 1.5 moles of $KMnO_4$ will oxidise 1 mole of ferrous oxalate in acidic medium.
- C. 0.6 moles $KMnO_4$ will oxidise 1 mole of ferrous oxalate to one mole of ferric ion and carbon dioxide in acidic medium.
- D. 1 mole of $K_2Cr_2O_7$ will oxidise 2 moles of ferrous oxalate to ferric ions and carbon dioxide in acidic medium.

Answer: b



[View Text Solution](#)

188. H_2O_2 acts as both oxidising and reducing agent. As oxidising agent, its product is H_2O but as reducing agent, its product is O_2 . Volume strength has great significance for chemical reactions. The strength of '10 V' means 1 volume (or litre) of H_2O_2 on decomposition

$\left(H_2O_2 \rightarrow H_2O + \frac{1}{2} O_2 \right)$ gives 10 volumes (or litre) of oxygen at NTP.

15g $Ba(MnO_4)_2$ sample containing inert impurity is completely reacting with 100 mL of '11.2 V' H_2O_2 , then what will be the % purity of $Ba(MnO_4)_2$ in the sample: (Atomic mass: $Ba = 137$, $Mn = 55$)

- A. 5 %
- B. 10 %
- C. 50 %
- D. None of these

Answer: c

 [Watch Video Solution](#)

189. 1.2g of carbon is burnt completely in oxygen (limited supply) to produce CO and CO_2 . This mixture of gases is treated with solid I_2O_5 (to know the amount of CO produced). The liberated iodine required 120 ml of 0.1M hypo solution for complete titration. The percentage carbon converted into CO is :

A. 70 %

B. 100 %

C. 50 %

D. 30 %

Answer: a



Watch Video Solution

190. The valency factor of I_2 when, (i) it is formed by the reaction of potassium iodide and potassium iodate in acid medium and (ii) when it reacts with hypo, are respectively:

A. 2, 2

B. $\frac{5}{3}$, 2

C. $\frac{3}{5}$, 2

D. 5, 2

Answer: b

 [Watch Video Solution](#)

191. x gram of pure As_2S_3 is completely oxidised to respective highest oxidation states by 50 ml of 0.1 M hot acidified $KMnO_4$, then mass of As_2S_3 taken is :

A. 22.4g

B. 43.92g

C. 64.23g

D. None of these

Answer: d

 [Watch Video Solution](#)

192. The number of moles of oxalate ions oxidised by one mole of MnO_4^- ion in acidic medium is :

A. $\frac{5}{2}$

B. $\frac{2}{5}$

C. $\frac{3}{5}$

D. $\frac{5}{3}$

Answer: a



Watch Video Solution

193. What volume of 0.1M H_2O_2 solution will be required to completely reduce 1 litre of 0.1 M $KMnO_4$ in acidic medium?

A. 2500ml

B. 500ml

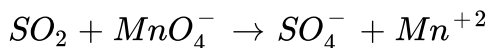
C. 1000ml

D. 1200ml

Answer: a

 [Watch Video Solution](#)

194. Calculate the number of millimoles of SO_2 if in the reaction, 10mL of 0.1M $KMnO_4$ solution are required for complete titration.



A. 2.5

B. 0.5

C. 1.25

D. None of these

Answer: a

 [Watch Video Solution](#)

195. 10 moles of ferric oxalate is oxidised by x mole of MnO_4^- in acidic medium. The value of 'x' is :

A. 12

B. 4

C. 40

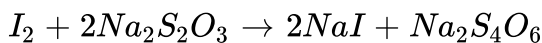
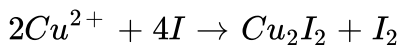
D. 18

Answer: a



Watch Video Solution

196. In iodometric estimation of Cu^{2+} ion, the following reaction took place



If 100mL OF $CuSO_4$ solution added to excess KI requires 50mL of 0.2M

$Na_2S_2O_3$ the molarity of $CuSO_4$ solution is :

A. $0.05M$

B. $0.1M$

C. $0.2M$

D. $0.25M$

Answer: b

 [Watch Video Solution](#)

197. Calculate the moles of $KMnO_4$ required to react completely with 2 m and 1500 mL of $K_2C_2O_4H_2C_2O_4$ in acidic medium.

A. 0.8

B. 0.6

C. 1.6

D. 2.4

Answer: d

 [Watch Video Solution](#)

198. 4 : 3 gm of an alkane is burnt in sufficient oxygen. The CO_2 formed reacts completely with 300mL , 2N NaOH solution producing Na_2CO_3 . The alkane should be :

- A. C_3H_8
- B. $C_{12}H_{26}$
- C. C_6H_{14}
- D. C_2H_6

Answer: c

 [Watch Video Solution](#)

199. What is the correct relation between normality (N) and molarity (M) of $K_2Cr_2O_7$ acting as oxidising agent in acidic medium?

A. $M=6N$

B. $N=3M$

C. $M=3N$

D.

Answer: a



Watch Video Solution

200. Number of moles of electrons in the reaction during formation of 1 mole of Fe_3O_4 according to the reaction $Fe + H_2O \rightarrow Fe_3O_4 + H_2$ will be :

A. 1

B. 5

C. 3

D. 8

Answer: d



Watch Video Solution

201. 25 ml of $\frac{N}{10}$ caustic soda solution exactly neutralised 20ml of an acid solution containing 7.875gm of acid per litre. What will be the equivalent mass of acid?

A. 63

B. 126

C. 26

D. 25

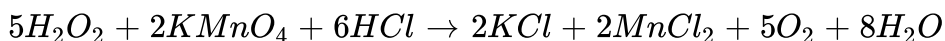
Answer: a



Watch Video Solution

202. 10mL of H_2O solution weighs 10 gm. The solution is diluted to 250mL. 25mL of this diluted solution required 40 mL of a M/50 solution of $KMnO_4$. Then, volume Strenght of original H_2O_2 , solution is :

Given:



A. 22.7V

B. 11.35V

C. 45.4V

D. 2.27V

Answer: a



Watch Video Solution

203. 0.8 M $FeSO_4$ solution requires 160mL, 0.2 M $Al_2(Cr_2O_7)_3$ in acidic medium. Calculate volume of $FeSO_4$ consumed :

A. 480mL

B. 240mL

C. 720mL

D. 40mL

Answer: c



Watch Video Solution

204. If valence factor (n-factor) of compound $NaHC_2O_4 \cdot 2H_2C_2O_4 \cdot 3K_2C_2O_4 \cdot 4Al_2(C_2O_4)_3 \cdot 3FeC_2O_4$ in acid base titration is x and redox titration with $KMnO_4$ is y then value of y/x is:

A. 8.4

B. 9

C. 11.25

D. 12

Answer: b

 [Watch Video Solution](#)

205. In alkaline medium, ClO_2 oxidises H_2O_2 to O_2 and is itself reduced to Cl^\ominus . How many moles of H_2O_2 are oxidised by 1 mol of ClO_2 ?

A. 1

B. 1.5

C. 2.5

D. 3.5

Answer: c

 [Watch Video Solution](#)

206. If equal volume of 1M $KMnO_4$ and 1M $K_2Cr_2O_7$ solution are used to react with Fe^{2+} oxidized will be :

A. more by $K_2Cr_2O_7$

B. more by $KMnO_4$

C. equal in both cases

D. Fe^{2+} cannot be oxidized

Answer: a

 [Watch Video Solution](#)

207. In a titration of H_2O_2 certain amount is treated with 'y' mole of $KMnO_4$ in acidic medium. The mole of H_2O_2 in solution will be :

A. $3y$

B. $\frac{5y}{2}$

C. $5y$

D. $2y$

Answer: b

 [Watch Video Solution](#)

208. 5mL of $N - \text{HCl}$, 20mL of $N/2\text{H}_2\text{SO}_4$ and 30mL of $N/3 \text{HNO}_3$ are mixed together and the volume is made to 1L . The normality of the resulting solution is

- A. 1gm
- B. 0.5gm
- C. 0.1gm
- D. 21.8gm

Answer: d

 [Watch Video Solution](#)

209. In basic medium CrO_4^{2-} reacts with $\text{S}_2\text{O}_3^{2-}$ resulting in the formation of $\text{Cr}(\text{OH})_4^\ominus$ and SO_4^{2-} . How many " mL of " $0.1 \text{M Na}_2\text{CrO}_4$ is required to react with 40 " mL of " $0.25 \text{M Na}_2\text{S}_2\text{O}_3$?

A. 16mL

B. 32mL

C. 128mL

D. 42mL

Answer: c



Watch Video Solution

210. What is the molarity of H_2O_2 solution whose 100mL produce the 0.5 moles of I_2 , when reacted with excess KI solution?

A. 0.5M

B. 1M

C. 2.5M

D. 5M

Answer: d

 [Watch Video Solution](#)

211. Moles of $K_2Cr_2O_7$ used to oxidise 1 mol $Fe_{0.92}O$ to Fe^{3+} are :

A. $\frac{0.92}{6}$

B. $\frac{70}{92} \times \frac{1}{6}$

C. $\frac{0.76}{6}$

D. $\frac{70}{92} \times \frac{1}{3}$

Answer: c

 [Watch Video Solution](#)

212. In a titration certain amount of H_2O_2 is treated with y mole of $KMnO_4$ in acidic medium. The left out $KMnO_4$ when treated with X^+ in basic medium oxidizes X^{+1} to X^{+6} and 0.2 M, x L of X^+ was consumed. The mole of given H_2O_2 solution is :

A. $\frac{y-x}{5}$

B. $5\left(\frac{y-x}{2}\right)$

C. $\frac{(5y-x)}{10}$

D. $\frac{(5y-x)}{5}$

Answer: b



Watch Video Solution

213. x m mol of KIO_3 reacts completely with y m mol of KI to give I_2 quantitatively. If z m mol of hypo are required for complete titration against this I_2 , then, which statement is incorrect?

A. $z=6x$

B. $6y=5z$

C. $5x=y$

D. $x+y=2z$

Answer: d

 [Watch Video Solution](#)

214. In basic medium, CrO_4^{2-} oxidises $S_2O_3^{2-}$ to form SO_4^{2-} and itself changes to $Cr(OH)_4^-$. How many mL of 0.154M CrO_4^{2-} are required to react with 40mL of 0.308 M $S_2O_3^{2-}$?

- A. 213mL
- B. 156.4mL
- C. 170.4mL
- D. 190.4mL

Answer: a

 [Watch Video Solution](#)

215. What would be the normality of a 0.1 M $K_2Cr_2O_7$ solution used as an oxidizing agent of $Pb^{(2+)}$?

- A. 0.1N
- B. 0.6N
- C. 0.4N
- D. 0.2N

Answer: b



Watch Video Solution

216. A solution of 0.4 g sample of H_2O_2 reacted with 0.632 g of $KMnO_4$ in presence of sulphuric acid. The percentage purity of the sample of H_2O_2 is :

- A. 0.95
- B. 0.85

C. 0.8

D. none of these

Answer: b

 [Watch Video Solution](#)

217. 0.3g of an oxalate salts was dissolved in 100mL solution. The solution required 90mL of $N/20KMnO_4$ for complete oxidation. The % of oxalate ion in salt is:

A. 0.33

B. 0.66

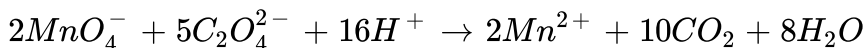
C. 0.7

D. 0.4

Answer: b

 [Watch Video Solution](#)

218. In the redox reaction,



20mL of 0.1 M $KMnO_4$ reacts quantitatively with :

- A. 20mL of 0.1 M oxalate
- B. 40mL of 0.1 M oxalate
- C. 50ml of 0.25 M oxalate
- D. 50mL of 0.1 M oxalate

Answer: d



Watch Video Solution

219. 4-amino-3-methylbutanoic acid is treated with thionyl chloride followed by ammonia to obtain compound X. X on reaction with, bromine in an alkaline medium gave compound Y. For estimation, Y was titrated

with perchloric acid. The volume of 0.1 M perchloric acid needed to react with 0.22 g of Y is :

- A. 50mL
- B. 80mL
- C. 120mL
- D. 200mL

Answer: a



[Watch Video Solution](#)

220. A 0.200g sample of benzoic acid, C_6H_5COOH , is titrated with a 0.120 M $Ba(OH)_2$ solution. What volume of the $Ba(OH)_2$ solution is required to reach the equivalence point?

Substance	Molar mass
C_6H_5COOH	122.1 g mol^{-1}

- A. 6.82mL
- B. 13.6mL

C. 17.6mL

D. 35.6mL

Answer: a

 [Watch Video Solution](#)

221. A 1.50 mL sample of a sulphuric acid solution from an automobile storage battery is titrated with 1.47 M sodium, hydroxide solution to a phenolphthalein endpoint. Requiring 23.70mL. What is the molarity of the sulphuric acid solution?

A. 23.3M

B. 11.6M

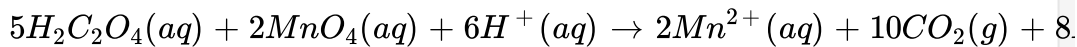
C. 6.30M

D. 0.181M

Answer: b

 [Watch Video Solution](#)

222.



Oxalic acid, $H_2C_2O_4$, reacts with permanganate ion according to the balanced equation above. How many mL of 0.0154 M $KMnO_4$ solution are required to react with 25.0 mL of 0.208 M $H_2C_2O_4$ solution?

- A. 13.5 mL
- B. 18.5 mL
- C. 33.8 mL
- D. 84.4 mL

Answer: a

[Watch Video Solution](#)

223. A 25.00mL sample of 0.1050 M H_2SO_4 is titrated with a NaOH solution of unknown concentration. The phenolphthalein endpoint was reached when 17.23 mL of the $NaOH$ solution had been added. What is the concentration of the NaOH?

- A. 0.07617 M
- B. 0.1447M
- C. 0.1524M
- D. 0.3047M

Answer: d



Watch Video Solution

224. Acidified solution of dichromate ion, $Cr_2O_7^{2-}$ oxidize Fe^{2+} to Fe^{3+} , forming Cr^{3+} in the process. What volume of 0.175 M $K_2Cr_2O_7$ in mL is required to oxidize 60.0mL of 0.250 M $FeSO_4$?

A. 14.3

B. 28.6

C. 42.9

D. 85.7

Answer: a



Watch Video Solution

225. When potassium permanganate, $KMnO_4$, is added to an acidified solution of oxalic acid, $H_2C_2O_4$, the products are CO_2 gas and Mn^{2+} ions. What is the reducing agent in this reaction?

A. $KMnO_4$

B. $H_2C_2O_4$

C. H_3O^+

D. CO_2

Answer: b

 [Watch Video Solution](#)

226. In the titration of a monoprotic acid with a solution of sodium hydroxide of known concentration, what quantities are equal at the equivalence point?

- A. The concentrations of hydroxide and hydronium ions
- B. The number of moles of hydroxide ion added and the number of moles of hydronium ion initially present
- C. The volume of sodium hydroxide solution added and the volume of acid solution initially present
- D. The number of moles of hydroxide ion added and the number of moles of monoprotic acid initially present

Answer: d

 [View Text Solution](#)

227. A solution of $Na_2S_2O_3$ is standardized iodometrically against 0.1262 g of $KBrO_3$ where BrO_3^- changes to Br^- . This process requires 45 mL of the $Na_2S_2O_3$ solution. What is the molarity of the $Na_2S_2O_3$? [M.W. of $KBrO_3=167$]

A. 0.2

B. 0.1

C. 0.05

D. 0.01

Answer: b



Watch Video Solution

228. For the following reaction $C_6H_5NO_2 + O_2 \rightarrow CO_2 + H_2O + N_2$

Choose the correct statement (s).

- A. Number of electrons lost by one molecule of $C_6H_5NO_2$ are 25
- B. One mole $C_6H_5NO_2$ required 11.2 mole oxygen atoms for complete oxidation.
- C. One mole $C_6H_5NO_2$ on combustion give 22.4 litre $N_2(g)$ at 1atm and 273 K
- D. One mole of $C_6H_5NO_2$ on combustion give 22.4 litre $H_2O(l)$ at 1 atm and 273K

Answer: a

 [Watch Video Solution](#)

229. 40mL 0.1 N $KMnO_4$ is equivalent to 30mL KHC_2O_4 solution. How many mL of 0.1 N KOH are required to titrate 60mL of same KHC_2O_4 solution?

- A. 40mL
- B. 30mL

C. 28.57mL

D. 35.5mL

Answer: a

 [Watch Video Solution](#)

230. An aqueous solution of 18 gm oxalic acid ($H_2C_2O_4$) is made up to 400 ml. calculate the volume of 0.1 M NaOH required to completely neutralize of 50 mL of above solution.

A. 500 mL

B. 50 mL

C. 400 mL

D. 200 mL

Answer: a

 [Watch Video Solution](#)

231. How many milli grams of $Fe_{0.9}O$ reacts completely with 10 mL 0.1 M $KMnO_4$ solution in acidic conditions ? (Fe =56)

- A. 47
- B. 402
- C. 534
- D. 570

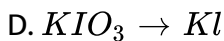
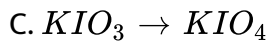
Answer: b



Watch Video Solution

232. 0.32 grams of N_2H_4 was oxidised by 100 mL, 0.1 M KIO_3 in conc. HCl where N_2H_4 is converted to N_2 . possible conversion of KIO_3 is

- A. $KIO_3 \rightarrow I_2$
- B. $KIO_3 \rightarrow ICl$



Answer: b

 [Watch Video Solution](#)

233. A solution of $Ba(OH)_2$ is standardized with potassium acid phthalate (abbreviated KHP), $KHC_8H_8O_4$ ($M=204$). If 1.530 g of KHP is titrated with 34.50 mL of the $Ba(OH)_2$ solution, what is the molarity of $Ba(OH)_2$?

A. 0.0217 M

B. 0.435 M

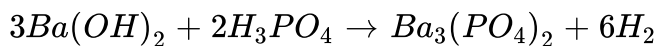
C. 0.109 M

D. 0.217 M

Answer: c

 [Watch Video Solution](#)

234. What volume (in mL) of 0.0500 M phosphoric acid is needed to titrate completely 25.0 mL of 0.150 M barium hydroxide solution to a phenolphthalein end point ?



- A. 50
- B. 75
- C. 100
- D. 150

Answer: a

[Watch Video Solution](#)

235. A student gets fingerprints on a cuvette before using it to determine the concentration of a coloured species using its known extinction

coefficient. What is the effect on the absorbance and reported concentration ?

- | | | |
|----|-------------------------|------------------------------------|
| A. | absorbance
Increased | Reported concentration
too low |
| B. | absorbance
Increased | Reported concentration
too high |
| C. | absorbance
decreased | Reported concentration
too low |
| D. | absorbance
decreased | Reported concentration
too high |

Answer: b



[View Text Solution](#)

236. Amount of oxalic acid present in a solution can be determined by its titration with $KMnO_4$ solution in the presence of H_2SO_4 . The titration gives unsatisfactory result when carried out in the presence of HCl because HCl:

- A. furnishes H^+ ions in addition to those from oxalic acid.
- B. reduced permanganate to Mn^{2+}

C. oxidised oxalic acid to carbon dioxide and water.

D. gets oxidised by oxalic acid to chlorine.

Answer: b

 [Watch Video Solution](#)

237. In the reaction $H_2O_2^{18} + O_3 \rightarrow$ water + oxygen, radioactivity will be shown by which of the product ?

A. Water

B. oxygen

C. Both (a) and (b)

D. None of these

Answer: b

 [Watch Video Solution](#)

238. Which method (s) can be used to determine the concentration of HNO_3 in an aqueous solution of nitric acid ?

(P) Titration with a standard base

(Q) Titration with a standard oxidizing agent

(R) Precipitation with Ag^+

A. P only

B. R only

C. P and Q only

D. P,Q and R

Answer: a



[Watch Video Solution](#)

239. Which separation technique is based on difference in the volatility of the of the substances to be separated ?

A. Filtration

B. Distillation

C. Solvent extraction

D. Paper chromatography

Answer: b

 [Watch Video Solution](#)

240. A student is asked to measure 12 mL of a liquid as precisely as possible. Which piece of equipment should she select for this task ?

A. 25 mL beaker

B. 25 mL graduated cylinder

C. 25 mL conical flask

D. 25 mL volumetric flask

Answer: b

 [Watch Video Solution](#)

241. The principal reason that solid sodium hydroxide is not used as a primary standard for acid-base titration is that it :


- A. absorbs water from air
- B. has a low molar mass
- C. reacts slowly with many acids
- D. ionizes in water

Answer: a



Watch Video Solution

242. What value should be reported for the buret reading shown for a coloured solution ?



- A. 22.3 mL
- B. 22.30 mL
- C. 22.36 mL
- D. 22.40 mL

Answer: a



Watch Video Solution

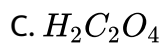
243. Which piece of apparatus can measure a volume of 25.0 mL most precisely ?

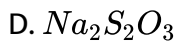
- A. 25 mL beaker
- B. 25 mL conical flask
- C. 25 mL graduated cylinder
- D. 25 mL pipet

Answer: d

 [Watch Video Solution](#)

244. Which solution can serve as both reactant and indicator when it is used in redox titrations ?





Answer: b

 [Watch Video Solution](#)

245. A standard HCl solution is titrated to a pink phenolphthalein endpoint by adding NaOH solution while stirring. If a solution becomes pink throughout but loses its colour upon standing for a short time, what should be done to restore the colour?

- A. Add more phenolphthalein indicator
- B. Add an additional drop of NaOH solution
- C. Add an additional drop of HCl solution.
- D. Stir more vigorously.

Answer: b

 [Watch Video Solution](#)

246. In the determination of the molar mass of a solid acid by titrating it with a standardized base, which procedural error will yield a molar mass that is smaller than the actual value?

- A. Adding the standardized base to a buret containing drops of water
- B. Dissolving the weighed solid acid in twice the recommended volume of water
- C. Using half as many drops of indicator as suggested
- D. Weighing out half of the recommended mass of solid acid

Answer: a

 [Watch Video Solution](#)

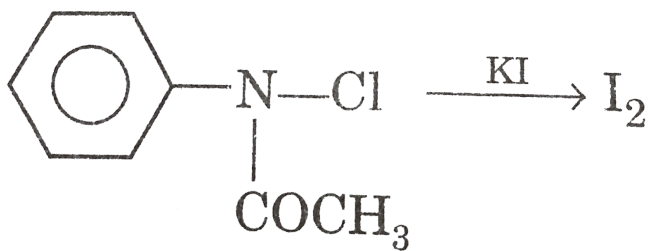
247. A NaOH solution is to be standardized by titrating it against a known mass of potassium hydrogen phthalate. Which procedure will give a molarity of NaOH that is too low ?

- A. Deliberately weighing one half the recommended amount of potassium hydrogen phthalate.
- B. Dissolving the potassium hydrogen phthalate in more water than is recommended.
- C. Neglecting to fill the tip of the buret with NaOH solution before titrating.
- D. Losing some of the potassium hydrogen phthalate solution from the flask before

Answer: c

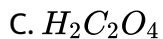
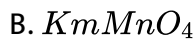
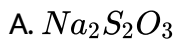


Watch Video Solution

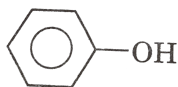


248.

Kinetics can be studied by titration using



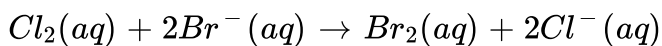
D.



Answer: a

 Watch Video Solution

249. For the reaction :



Which of the following could be used to monitor the rate ?

(P) pH meter

(Q) Spectrophotometer

A. P only

B. Q only

C. Either P or Q

D. Neither P nor Q

Answer: b



[Watch Video Solution](#)

250. All of the following can be used as primary standards in acid-base titration except :

A. oxalic acid

B. potassium hydrogen phthalate

C. sodium carbonate

D. sodium hydroxide

Answer: d

 [Watch Video Solution](#)

251. Which experimental procedure is best suited to determine the H_2O_2 concentration in an aqueous solutions ?

A. Precipitation with standard $MgCl_2$ solution

B. Reaction with excess Zn to form H_2

C. Titration with standard H_2SO_4

D. Titration with standard $KMnO_4$

Answer: d

 [Watch Video Solution](#)

252. The table below shows the data for three titrations to determine the concentration of a NaOH solution With standard 0.200 M HCl solution using phenolphthalein as the indicator

Trial	Vol HCl, mL	Vol NaOH, mL	M_{NaOH} , calc.
1	21.43	19.26	0.223
2	18.57	16.73	0.222
3	22.20	21.14	0.210

Which explanation best accounts for the lower value of the NaOH M in Trial 3 ?

- A. Some of the neutralized solution from Trial 2 was left in the flask for Trial 3.
- B. The numner of drops of phenolphtalein was doubled in Trial 3.
- C. The HCl concentration was used as 0.250 M in the NaOH molarity calculation .
- D. A few drops of NaOH solution were spilled on the desktop in Trial 3.

Answer: d

253. Statements 1: Moles of $KMnO_4$ required for oxidation of Fe^{+2} in acidic and basic medium will be different.

Statement 2: Final oxidation state to which Mn^{+7} will be reduced will be different in case of acidic and basic medium.

- A. Statement-1 is True, Statement-2 is True, Statement-2 is a correct explanation for Statement-1
- B. Statement-1 is True, Statement-2 is True, Statement-2 is NOT a correct explanation for Statement-1
- C. Statement-1 is True, Statement-2 is False .
- D. Statement-1 is True False, Statement-2 is True.

Answer: a

254. Statements 1: Both CrO_4^{2-} and $Cr_2O_7^{2-}$ ions when treated with acidified H_2O_2 solution gives blue solution which turns green on standing.

Statement 2: Blue solution of CrO_5 is stabilised in the presence of organic solvent, e.g., ether, pyridine, etc.

A. Statement-1 is True, Statement-2 is True, Statement-2 is a correct explanation for Statement-2

B. Statement-1 is True, Statement-2 is True, Statement-2 is NOT a correct explanation for Statement-2

C. Statement-1 is True, Statement-2 is False .

D. Statement-1 is True False, Statement-2 is True.

Answer: b



Watch Video Solution

255. Statement 1: The oxidation state of oxygen in superoxide ion in KO_2 , CsO_2 and RbO_2 is $-1/2$.

Statement 2: Since the oxidation state of an alkali metal in any compound is always $+1$, the oxidation state of oxygen is $-1/2$ in the O_2^- ion.

A. Statement-1 is True, Statement-2 is True, Statement-2 is a correct explanation for Statement-3

B. Statement-1 is True, Statement-2 is True, Statement-2 is NOT a correct explanation for Statement-3

C. Statement-1 is True, Statement-2 is False .

D. Statement-1 is True False, Statement-2 is True.

Answer: a



Watch Video Solution

256. Assertion: In the redox reaction $8H^+(aq) + 4NO_3^- + 6Cl^- + Sn(s) \rightarrow SnCl_6^{2-} + 4NO_2 + 4H_2O$, the reducing agent is $Sn(s)$.

Reason In balancing half-reaction, $S_2O_3^{2-} \rightarrow S(s)$, the number of electrons added on the left is 4.

- A. Statement-1 is True, Statement-2 is True, Statement-2 is a correct explanation for Statement-1
- B. Statement-1 is True, Statement-2 is True, Statement-2 is NOT a correct explanation for Statement-1
- C. Statement-1 is True, Statement-2 is False .
- D. Statement-1 is True False, Statement-2 is True.

Answer: b

 [Watch Video Solution](#)

257. Statement 1: In the reaction, $MnO_4^- + 5Fe^{2+} + 4H_2O, MnO_4^-$ acts as oxidising agent.

Statement 2: In the above reaction, Fe^{2+} is converted to Fe^{3+} .

- A. Statement-1 is True, Statement-2 is True, Statement-2 is a correct explanation for Statement-1
- B. Statement-1 is True, Statement-2 is True, Statement-2 is NOT a correct explanation for Statement-1
- C. Statement-1 is True, Statement-2 is False .
- D. Statement-1 is True False, Statement-2 is True.

Answer: a



[Watch Video Solution](#)

258. Assertion: If 200mL of 0.1N NaOH is added to 200mL of $0.1\text{N H}_2\text{SO}_4$ solution. Then the resulting solution is acidic.

Reason: If milliequivalent of acid is greater than milliequivalents of base, then upon mixing the solution is acidic.

- A. Statement-1 is True, Statement-2 is True, Statement-2 is a correct explanation for Statement-6
- B. Statement-1 is True, Statement-2 is True, Statement-2 is NOT a correct explanation for Statement-6
- C. Statement-1 is True, Statement-2 is False .
- D. Statement-1 is True False, Statement-2 is True.

Answer: d

 [Watch Video Solution](#)

259. Assertion: Equivalent weight of FeC_2O_4 in the reaction, $FeC_2O_4 +$ Oxidising agent $\rightarrow Fe^{3+} + CO_2$ is $M/3$, where M is molar mass of FeC_2O_4 .

Reason: In the above reaction, total two mole of electrons are given up by 1mole of FeC_2O_4 to the oxidising agent.

- A. Statement-1 is True, Statement-2 is True, Statement-2 is a correct explanation for Statement-1
- B. Statement-1 is True, Statement-2 is True, Statement-2 is NOT a correct explanation for Statement-1
- C. Statement-1 is True, Statement-2 is False .
- D. Statement-1 is True, Statement-2 is False.

Answer: c



[Watch Video Solution](#)

260. Assertion: In the titration of Na_2CO_3 with HCl using methyl orange indicator, the volume of acid required is twice that of the acid required using phenolphthalein as indicator.

Reason: Two moles of HCl are required for the complete neutralisation of one mole of Na_2CO_3 .

- A. Statement-1 is True, Statement-2 is True, Statement-2 is a correct explanation for Statement-8
- B. Statement-1 is True, Statement-2 is True, Statement-2 is NOT a correct explanation for Statement-8
- C. Statement-1 is True, Statement-2 is False .
- D. Statement-1 is True False, Statement-2 is True.

Answer: b



[Watch Video Solution](#)

261. Identify the incorrect statements.

- A. At Boyle's temperature, there exists a pressure where compressibility of a real gas is more than that of ideal gas.

- B. The parent and daughter nuclei in a α -decay are isodiaphers.
- C. The magnetic moment of Cr^{+1} is more than that of Cr.
- D. The equivalent weight of Na_2CO_3 in its titration with HCl is 106 when phenolphthalien is used as an indicator.

Answer: a,c

 [View Text Solution](#)

262. Which of the following reaction are example of redox reactions?

- A. $KMnO_4 + H_2SO_4 + CO \rightarrow$
- B. $K_2Cr_2O_7 + H_2SO_4 + HCl \rightarrow$
- C. $CuSO_4 + KCN(\text{excess}) \rightarrow$
- D. $CuSO_4 + KI(\text{excess}) \rightarrow$

Answer: a,b,c,d

 [Watch Video Solution](#)

263. 100mL of H_2O_2 solution having volume strength 11.35 V is mixed with 50mL of 0.5M KI solution to liberate I_2 gas. All the I_2 gas liberated is trapped to form a 500mL solution termed as X. 200mL of the solution X of I_2 required 50mL hypo solution for conversion to I^- and $S_4O_6^{2-}$. Assuming all reactions to undergo 100% completion, identify to correct option (s)

A. Volume strength of remaining H_2O_2 solution will be 6.62V

B. Molarity of I_2 in solution X is 0.025M

C. Molarity of hypo solution taken is 0.2M

D. Moles of tetrathionate ions formed will be 0.01

Answer: a,b,c



Watch Video Solution

264. 25 mL of 0.50 M H_2O_2 solution is added to 50 mL of 0.20 M $KMnO_4$ in acid solution. Which of the following statements is true?

- A. 0.010 mole of oxygen gas is liberated
- B. 0.005 mole of $KMnO_4$ is left
- C. 0.030 g of oxygen gas is evolved
- D. 0.0025 mole H_2O_2 does not react with $KMnO_4$

Answer: a,c,d



Watch Video Solution

265. Which of the following compounds acts both as an oxidising as well as a reducing agent?

- A. HNO_2
- B. H_2O_2
- C. H_2S

D. SO_2

Answer: a,b,d

 [Watch Video Solution](#)

266. Which of the following samples of reducing agents is /are chemically equivalent to 25mL of 0.2 N $KMnO_4$ to be reduced to Mn^{2+} and water?

A. 25mL of 0.2M $FeSO_4$ to be oxidized to Fe^{3+}

B. 50mL of 0.1M H_3AsO_3 to be oxidized to H_3AsO_4

C. 25mL of 0.1 H_2O_2 to be oxidized to H^+ and O_2

D. 25mL of 0.1 M $SnCl_2$ to be oxidized to Sn^{4+}

Answer: a,c,d

 [Watch Video Solution](#)

267. In the titration of $K_2Cr_2O_7$ and ferrous sulphate, following data is obtained:

V_1 mL of $K_2Cr_2O_7$ solution of molarity M_1 requires V_2 mL of $FeSO_4$ solution of molarity M_2 .

Which of the following relations is /are true for the above titration?

A. $6M_1V_1 = M_2V_2$

B. $M_1V_1 = 6M_2V_2$

C. $N_1V_1 = N_2V_2$

D. $M_1V_1 = M_2V_2$

Answer: a,c



Watch Video Solution

268. 0.1M solution of KI reacts with excess of H_2SO_4 and KIO_3 solutions, according to equation

$5I^- + IO_3^- + 6H^+ \rightarrow 3I_2 + 3H_2O$, which of the following statements is /are correct:

- A. 200mL of the KI solution react with 0.004 mole KIO_3
- B. 100mL of the KI solution reacts with 0.006 mole of H_2SO_4 .
- C. 0.5 litre of the KI solution produced 0.005 mole of I_2
- D. Equivalent weight of KIO_3 is equal to $\left(\frac{\text{Molecular weight}}{5} \right)$.

Answer: a,b,d



Watch Video Solution

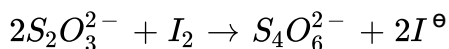
269. The oxidation state of Fe in Fe_3O_4 is :

- A. 2 and 3
- B. $\frac{8}{3}$
- C. 2
- D. 3

Answer: a,b

 Watch Video Solution

270. Consider the redox reaction



A. $S_2O_3^{2-}$ gets reduced to $S_4O_6^{2-}$

B. $S_2O_3^{2-}$ gets oxidised to $S_4O_6^{2-}$

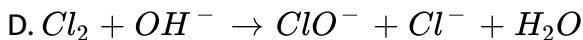
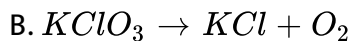
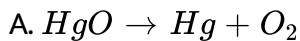
C. I_2 gets reduced to I^-

D. I_2 gets oxidised to I^-

Answer: b,c

 Watch Video Solution

271. Which of the following are examples of disproportionation reaction?



Answer: c,d

 [Watch Video Solution](#)

272. Two samples of HCl of $1.0M$ and $0.25M$ are mixed. Find volumes of these samples taken in order to prepare $0.75MHCl$ solution. Assume no water is added.

(I) $20mL$, $10mL$ (II) $100mL$, $50mL$

(III) $40mL$, $20mL$ (IV) $50mL$, $25mL$

A. $20mL, 10mL$

B. $100mL, 20mL$

C. $40mL, 20mL$

D. 50mL,25mL

Answer: a,b,c,d

 [Watch Video Solution](#)

273. Equal weights of X (atomic weight = 36) and Y (atomic weight = 24) are reacted to form the compound X_2Y_3 , which of the following is/are correct

A. X is the limiting reagent

B. Y is the limiting reagent

C. no reactant is left over

D. Mass of X_2Y_3 formed is double the mass of ' X ' taken

Answer: c,d

 [Watch Video Solution](#)

274. Choose the correct statement(s):

A. 1 mole of MnO_4^- ion can oxidise 5 moles of Fe^{2+} ion in acidic medium

B. 1 mole of $Cr_2O_7^{2-}$ ion can oxidise 6 moles of Fe^{2+} ion in acidic medium

C. 1 mole of Cu_2S can be oxidised by 1.6 moles of MnO_4^- ion in acidic medium

D. 1 mole of Cu_2S can be oxidised by 1.33 moles of $Cr_2O_7^{2-}$ ion in acidic medium

Answer: a,b,c,d



Watch Video Solution

275. For the reaction $I_2 + NaOH \rightarrow NaIO_3 + NaI + H_2O$. Identify the correct statements.

(At.wt. of Na=23)

A. Reaction is an example of disproportionation

B. Equivalent weight of $I_2 = \frac{3}{5} \times (\text{mol. wt. of } I_2)$

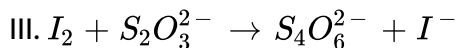
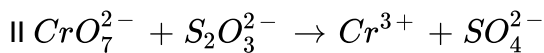
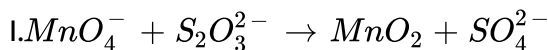
C. Eq. wt of NaOH in the reaction is 6.66

D. Eq. wt of NaOH in the reaction is 48

Answer: a,b,d

 [Watch Video Solution](#)

276. Three different solutions of oxidising agents $KMnO_4$, $K_2Cr_2O_7$ and I_2 is titrated separately with 0.158 gm of $Na_2S_2O_3$. If molarity of each oxidising agent is 0.1 M and reactions are :



A. Volume of $KMnO_4$ used in maximum

B. volume of iodine used in minimum

C. weight of I_2 used in titration is maximum

D. gram equivalent of $Na_2S_2O_3$ are same in all the reactions.

Answer: a,b

 Watch Video Solution

277. Choose the correct statement(s):

A. 1 mole of MnO_4^- ion can oxidise 10 moles of Fe^{2+} ion in acidic medium

B. 1 mole of $Cr_2O_7^{2-}$ ion can oxidise 12 moles of Fe^{2+} ion in acidic medium

C. 2 mole of Cu_2S can be oxidize by 2.6 moles of MnO_4^- ion in acidic medium.



D. 2 moles of Cu_2S can be oxidize by $8/3$ moles of $Cr_2O_7^{2-}$ ion in

acidic medium



Answer: a,b,c



Watch Video Solution

278. A mixture containing substance 'X' and 'Y' is mixed with a substance 'Z'. If 'Z' reacts with both X and Y then, select the correct option (s).

A. Moles of X+ Moles of Y= Total moles of Z reacted " is always applicable"

B. Equivalent of X +equivalent of Y= Total equivalent of Z reacted " is always applicable"

C.

$$\frac{\text{Equivalent of X}}{(\text{n-factor of Z in reaction with X})} + \frac{\text{Equivalent of Y}}{(\text{n-factor of Z in reaction with Y})}$$

D.

[Moles of Z reacted in reaction with X] + [Moles of Z reacted in reaction with Y]

Answer: c,d

 [Watch Video Solution](#)

279. A compound can be formed by the elements A,B and C having oxidation state +1,+2 and -3 respectively. Then which compound may be formed?

A. ABC

B. B_3C_2

C. A_2BC

D. A_4BC_2

Answer: a,d

 [Watch Video Solution](#)

280. 66 gm sample of an oxalate salt $Al_xH_y(C_2O_4)_z \cdot nH_2O$ is dissolved in water to form 500mL solution. 50mL solution requires 60mL of 0.5M $Ba(OH)_2$ and 240mL 0.1 M $KMnO_4$ in acidic medium separately. If in salt x,y,z and n are present in simplest ratio, then select the correct statement(s).

- A. Moles of oxalate salt in original sample is 0.2
- B. Ratio of y/z is equal is 1
- C. Value of $(x+y+z)-n=5$
- D. Number of oxalate ion per molecule of oxalate salt is 2

Answer: a,b,c

 [View Text Solution](#)

281. x mol of oxalate $FeC_2O_4 \cdot Fe_2(C_2O_4)_3 \cdot 2H_2O$ on reaction with $Al_2(Cr_2O_7)_3$ requires 500mL 0.4M of it. Select the correct statement(s)

A. n-factor of $Al_2(Cr_2O_7)_3$ is 6

B. n-factor of $Al_2(Cr_2O_7)_3$ is 18

C. Moles of oxalate which react with $Al_2(Cr_2O_7)_3$ is 0.4

D. Moles of oxalate which react with $Al_2(Cr_2O_7)_3$ is 0.65

Answer: b,c

 [Watch Video Solution](#)

282. A sample containing 1 mol $KHC_2O_4 \cdot H_2C_2O_4$ is titrated with different reagent. Select correct statement.

A. 1 mol of KOH are used

B. $\frac{3}{2}$ moles of $Ba(OH)_2$ are used

C. $\frac{4}{5}$ mol of $KMnO_4$ are used in alkaline medium

D. $\frac{2}{3}$ mol of $K_2Cr_2O_7$ are used in acidic medium

Answer: b,d

 [Watch Video Solution](#)

283. Barium permanganate solution (20mL, 0.1 M) is mixed with 0.1 N I^- giving precipitate for IO_3^- and MnO_2 . Resulting solution is filtered and titrated against Mo^{3+} , giving MoO_2^{2+} and Mn^{2+} . Which required 0.5 M, 10mL acidified Mo^{3+} . Select the correct option (s).

- A. Volume of I^- solution taken is 30mL
- B. Volume of I^- solution taken is 50mL
- C. Per mole Mn^{2+} formed, 4 moles of H^+ are consumed
- D. Per mole IO_3^- formed, 2 moles of MnO_4^- are consumed

Answer: a,d

 [View Text Solution](#)

284. $H_2C_2O_4$ and $NaHC_2O_4$ behave as acids as well as reducing agents.

Which are the correct statements?

A. Equivalent weight of $H_2C_2O_4$ and $NaHC_2O_4$ are equal to their molecular weights when behaving as reducing agents.

B. 100mL of 1N solution of each is neutralised by same volume of 1N $Ca(OH)_2$.

C. 100mL of 1N solution of each is neutralised by same volume of 1M $Ca(OH)_2$.

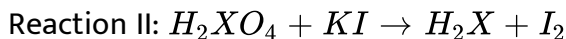
D. 100 mL of 1 N solution of each is oxidised by same volume of 1 N $KMnO_4$ solution in acidic medium.

Answer: b,d



Watch Video Solution

285. Consider two reaction: (X represent an element)



which of the following statements (s) is /are incorrect ?

- A. Molar mass of H_2XO_4 is equal in both reactions
- B. Equivalent mass of H_2XO_4 is equal in both reactions
- C. Equivalent mass of H_2XO_4 in Reaction-I is twice as in Reaction -II
- D. One mole of H_2XO_4 will contain same number of equivalent in both reactions

Answer: b,c,d

 [Watch Video Solution](#)

286. A,B and C are three elements forming a compound in which their oxidation state are +2,+5, and -2 respectively. Which could not be the formula of compound?

- A. $A_2(BC)$
- B. $A_2(BC_4)_3$
- C. $A_3(BC_4)_2$
- D. ABC_2

Answer: a,b,d



Watch Video Solution

287. A solution is prepared by dissolving a solid mixture of $K_2C_2O_4$ and KHC_2O_4 . A 10mL portion of this solution required 10mL, 0.05 M KOH solution for titration reaction. In a separate analysis 10mL, 0.06 M acidified $KMnO_4$ solution for titration. Which of the following are correct?

- A. The original mixture contains $K_2C_2O_4$ and KHC_2O_4 in 2:1 molar ratio.
- B. 20mL of the original stock solution require 3 millimoles of acidified dichromate solution for titration
- C. 20mL of the original stock solution requires 6 milli-equivalents of acidified dichromate solution for titration

D. The original mixture contains $K_2C_2O_4$ and KHC_2O_4 in 1:2 molar ratio

Answer: a,c

 [Watch Video Solution](#)

288. One mole of $KMnO_4$ is used for complete oxidation of Fe_2SO_4 , FeC_2O_4 and $H_2C_2O_4$ respectively (and separately). Pick up the correct statements:

- A. 5 mole of Fe_2SO_4 can be oxidised
- B. $\frac{3}{5}$ mole of FeC_2O_4 can be oxidised
- C. $\frac{5}{3}$ mole of $Fe_2C_2O_4$ can be oxidised
- D. 2.5 mole of $H_2C_2O_4$ can be oxidised

Answer: c,d

 [Watch Video Solution](#)

289. If 1 mole of $H_4P_2O_7$ is reacted with 1 mole of $A(OH)_3$ as $H_4P_2O_7 + A(OH)_3 \rightarrow AHP_2O_7 + 3H_2O$ then:

(Atomic wt. of A=69,P=31)

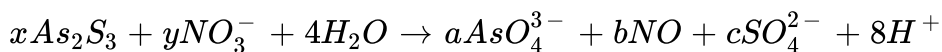
- A. equivalent weight of base is 40
- B. equivalent weight of $H_4P_2O_7$ is 59.34
- C. equivalent weight of base is 60
- D. if maximum oxidation number of A is +5 then it can also participate in redox titration.

Answer: a,b,d

 [Watch Video Solution](#)

290. Choose correct statements.

A. In the balanced redox reaction



molar ratio of x:y=3:28

B. when NH_4SCN oxidizes into SO_4^{2-} , CO_3^{2-} and NO_3^- its

equivalent weight will be $\frac{M}{24}$

C. when Bi_2S_3 converted into Bi^{5+} and S, n-factor will be 7

D. Equivalent weight of H_3PO_2 when it disproportionates into

PH_3 and H_3PO_3 is $3\frac{M}{4}$

Answer: a,b,d



Watch Video Solution

291. Select the correct statements.

A. In a mixture of KHC_2O_4 and $H_2C_2O_4$, $KMnO_4$ decolourises faster at higher temperature than lower temperature.

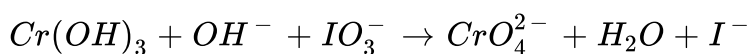
- B. A catalyst participates in a chemical reaction by forming temporary bonds with the reactant resulting in an intermediate complex.
- C. In collision theory, only activation energy determine the criteria for effective collision.
- D. Collision theory assumes molecules to be soft spheres and consider their structural aspects.

Answer: a,b



[View Text Solution](#)

292. In the following reaction:



- A. IO_3^- is oxidising agent
- B. $Cr(OH)_3$ is oxidised
- C. $6e^-$ are being taken per iodine atom

D. none of these

Answer: a,b



Watch Video Solution

293. Equivalent Mass

The equivalent mass of a substance is defined as the number of parts by mass of it which combine with or displace 1.0078 parts by mass of hydrogen, 8 parts by mass of oxygen and 35.5 parts by mass of chlorine.

The equivalent mass of a substance expressed in grams is called gram equivalent mass.

The equivalent mass of a substance is not constant. It depends upon the reaction in which the substance is participating. A compound may have different equivalent mass in different chemical reactions and under different experimental conditions.

(a) Equivalent mass of an acid

It is the mass of an acid in grams which contains 1.0078 g of replaceable H^+ ions or it is mass of acid which contains one mole of replaceable

H^+ ions. It may be calculated as :

$$\text{Equivalent mass of acid} = \frac{\text{Molecular mass of acid}}{\text{Basicity of acid}}$$

Basicity of acid = Number of replaceable hydrogen atoms present in one molecule of acid

(b) Equivalent mass of a base

It is the mass of the base which contains one mole of replaceable OH^- ions in molecules.

$$\text{Equivalent mass of base} = \frac{\text{Molecular mass of acid}}{\text{Acidity of acid}}$$

Acidity of base = Number of replaceable OH^- ions present in one molecule of the base

Equivalent mass of an oxidising agent

(a) Electron concept:

$$\text{Equivalent mass of oxidising agent} = \frac{\text{Molecular mass of oxidising agent}}{\text{Number of electrons gained by one molecule}}$$

(b) Oxidation number concept:

$$\text{Equivalent mass of oxidising agent} = \frac{\text{Molecular mass of oxidising agent}}{\text{Total change in oxidation number per molecule of oxidising agent}}$$

Equivalent mass of $Ba(MnO_4)_2$ in acidic medium is : (where M stands for molar mass)

A. $\frac{M}{5}$

B. $\frac{M}{6}$

C. $\frac{M}{10}$

D. $\frac{M}{2}$

Answer: c



Watch Video Solution

294. Equivalent Mass

The equivalent mass of a substance is defined as the number of parts by mass of it which combine with or displace 1.0078 parts by mass of hydrogen, 8 parts by mass of oxygen and 35.5 parts by mass of chlorine.

The equivalent mass of a substance expressed in grams is called gram equivalent mass.

The equivalent mass of a substance is not constant. It depends upon the reaction in which the substance is participating. A compound may have different equivalent mass in different chemical reactions and under

different experimental conditions.

(a) Equivalent mass of an acid

It is the mass of an acid in grams which contains 1.0078 g of replaceable

H^+ ions or it is mass of acid which contains one mole of replaceable

H^+ ions. It may be calculated as :

$$\text{Equivalent mass of acid} = \frac{\text{Molecular mass of acid}}{\text{Basicity of acid}}$$

Basicity of acid = Number of replaceable hydrogen atoms present in one molecule of acid

(b) Equivalent mass of a base

It is the mass of the base which contains one mole of replaceable OH^- ions in molecules.

$$\text{Equivalent mass of base} = \frac{\text{Molecular mass of acid}}{\text{Acidity of acid}}$$

Acidity of base = Number of replaceable OH^- ions present in one molecule of the base

Equivalent mass of an oxidising agent

(a) Electron concept:

Equivalent mass of oxidising agent =

$$\frac{\text{Molecular mass of oxidising agent}}{\text{Number of electrons gained by one molecule}}$$

(b) Oxidation number concept:

Equivalent mass of oxidising agent =

Molecular mass of oxidising agent

Total change in oxidation number per molecule of oxidising agent

Equivalent mass of $Fe_{0.9}O$ in reaction with acidic $K_2Cr_2O_7$ is : (M= Molar mass)

A. $7\frac{M}{10}$

B. $10\frac{M}{7}$

C. $7\frac{M}{9}$

D. $9\frac{M}{7}$

Answer: b



Watch Video Solution

295. Equivalent Mass

The equivalent mass of a substance is defined as the number of parts by mass of it which combine with or displace 1.0078 parts by mass of hydrogen, 8 parts by mass of oxygen and 35.5 parts by mass of chlorine.

The equivalent mass of a substance expressed in grams is called gram

equivalent mass.

The equivalent mass of a substance is not constant. It depends upon the reaction in which the substance is participating. A compound may have different equivalent mass in different chemical reactions and under different experimental conditions.

(a) Equivalent mass of an acid

It is the mass of an acid in grams which contains 1.0078 g of replaceable H^+ ions or it is mass of acid which contains one mole of replaceable H^+ ions. It may be calculated as :

$$\text{Equivalent mass of acid} = \frac{\text{Molecular mass of acid}}{\text{Basicity of acid}}$$

Basicity of acid = Number of replaceable hydrogen atoms present in one molecule of acid

(b) Equivalent mass of a base

It is the mass of the base which contains one mole of replaceable OH^- ions in molecules.

$$\text{Equivalent mass of base} = \frac{\text{Molecular mass of acid}}{\text{Acidity of acid}}$$

Acidity of base = Number of replaceable OH^- ions present in one molecule of the base

Equivalent mass of an oxidising agent

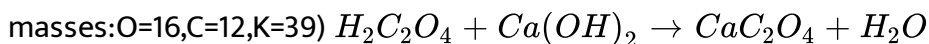
(a) Electron concept:

$$\text{Equivalent mass of oxidising agent} = \frac{\text{Molecular mass of oxidising agent}}{\text{Number of electrons gained by one molecule}}$$

(b) Oxidation number concept:

$$\text{Equivalent mass of oxidising agent} = \frac{\text{Molecular mass of oxidising agent}}{\text{Total change in oxidation number per molecule of oxidising agent}}$$

Equivalent weight of oxalic acid salt in following reaction is :(Atomic



A. 90

B. 45

C. 64

D. 128

Answer: c



Watch Video Solution

296. Equivalent Mass

The equivalent mass of a substance is defined as the number of parts by mass of it which combine with or displace 1.0078 parts by mass of hydrogen, 8 parts by mass of oxygen and 35.5 parts by mass of chlorine.

The equivalent mass of a substance expressed in grams is called gram equivalent mass.

The equivalent mass of a substance is not constant. It depends upon the reaction in which the substance is participating. A compound may have different equivalent mass in different chemical reactions and under different experimental conditions.

(a) Equivalent mass of an acid

It is the mass of an acid in grams which contains 1.0078 g of replaceable H^+ ions or it is mass of acid which contains one mole of replaceable H^+ ions. It may be calculated as :

$$\text{Equivalent mass of acid} = \frac{\text{Molecular mass of acid}}{\text{Basicity of acid}}$$

Basicity of acid = Number of replaceable hydrogen atoms present in one molecule of acid

(b) Equivalent mass of a base

It is the mass of the base which contains one mole of replaceable OH^- ions in molecules.

$$\text{Equivalent mass of base} = \frac{\text{Molecular mass of acid}}{\text{Acidity of acid}}$$

Acidity of base = Number of replaceable OH^- ions present in one molecule of the base

Equivalent mass of an oxidising agent

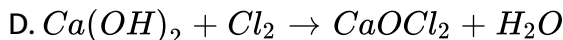
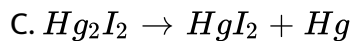
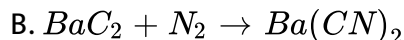
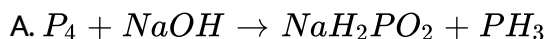
(a) Electron concept:

$$\text{Equivalent mass of oxidising agent} = \frac{\text{Molecular mass of oxidising agent}}{\text{Number of electrons gained by one molecule}}$$

(b) Oxidation number concept:

$$\text{Equivalent mass of oxidising agent} = \frac{\text{Molecular mass of oxidising agent}}{\text{Total change in oxidation number per molecule of oxidising agent}}$$

Which of the following is not a disproportionation reaction?



Answer: b

 [Watch Video Solution](#)

297. Equivalent Mass

The equivalent mass of a substance is defined as the number of parts by mass of it which combine with or displace 1.0078 parts by mass of hydrogen, 8 parts by mass of oxygen and 35.5 parts by mass of chlorine.

The equivalent mass of a substance expressed in grams is called gram equivalent mass.

The equivalent mass of a substance is not constant. It depends upon the reaction in which the substance is participating. A compound may have different equivalent mass in different chemical reactions and under different experimental conditions.

(a) Equivalent mass of an acid

It is the mass of an acid in grams which contains 1.0078 g of replaceable H^+ ions or it is mass of acid which contains one mole of replaceable H^+ ions. It may be calculated as :

$$\text{Equivalent mass of acid} = \frac{\text{Molecular mass of acid}}{\text{Basicity of acid}}$$

Basicity of acid = Number of replaceable hydrogen atoms present in one molecule of acid

(b) Equivalent mass of a base

It is the mass of the base which contains one mole of replaceable OH^- ions in molecules.

$$\text{Equivalent mass of base} = \frac{\text{Molecular mass of acid}}{\text{Acidity of acid}}$$

Acidity of base = Number of replaceable OH^- ions present in one molecule of the base

Equivalent mass of an oxidising agent

(a) Electron concept:

$$\text{Equivalent mass of oxidising agent} = \frac{\text{Molecular mass of oxidising agent}}{\text{Number of electrons gained by one molecule}}$$

(b) Oxidation number concept:

$$\text{Equivalent mass of oxidising agent} = \frac{\text{Molecular mass of oxidising agent}}{\text{Total change in oxidation number per molecule of oxidising agent}}$$

When NO_2 is dissolved in water solution become acidic. Equivalent weight of NO_2 in this reaction ($NO_2 + H_2O \rightarrow HNO_3 + HNO_2$) is :

B. 46

C. 92

D. 14

Answer: c



Watch Video Solution

298. In a balanced redox reaction net gain of electron (s) is equal to net loss of electrons (s). n_{factor} is a reaction specific parameter and for intermolecular redox reaction n-factor of oxidising reducing agent is the no. of moles of electron gained /lost by one mole of compound.

The n_{factor} of KI in the following reaction is :



A. 1

B. 2

C. $\frac{1}{4}$

D. none of these

Answer: b

 [Watch Video Solution](#)

299. In a balanced redox reaction net gain of electron (s) is equal to net loss of electrons (s). n_{factor} is a reaction specific parameter and for intermolecular redox reaction n-factor of oxidising reducing agent is the no. of moles of electron gained /lost by one mole of compound.

50mL 0.1 M CuSO_4 are mixed with 50mL of 0.1 M KI then, number of moles of electrons involved in the reaction will be:

A. 4

B. 2.5

C. 2.5×10^{-3}

D. none of these

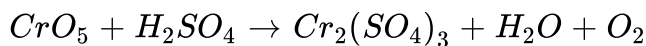
Answer: c



[View Text Solution](#)

300. In a balanced redox reaction net gain of electron (s) is equal to net loss of electrons (s). n_{factor} is a reaction specific parameter and for intermolecular redox reaction n-factor of oxidising reducing agent is the no. of moles of electron gained /lost by one mole of compound.

Consider the following reaction:



One mole of CrO_5 will liberate how many moles of O_2 ?

A. $\frac{7}{4}$

B. $\frac{5}{4}$

C. 1

D. none of these

Answer: a



[Watch Video Solution](#)

301. A 100mL solution containing 0.4 M As_2S_3 , 5M NaOH and 6M H_2O_2 are reacted to form AsO_4^{3-} and SO_4^{2-} as product.

What may be the correct coefficient of As_2S_3 , H_2O_2 and NaOH respectively in a balanced reaction?

A. 1,14,12

B. 1,12,14

C. 1,28,20

D. 1,28,18

Answer: a

 [View Text Solution](#)

302. A 100mL solution containing 0.4 M As_2S_3 , 5M NaOH and 6M H_2O_2 are reacted to form AsO_4^{3-} and SO_4^{2-} as product.

If final solution is allowed to stand for some time, what maximum volume of O_2 at 1 atm and 273K can be obtained by decomposition of H_2O_2 ?

A. 112mL

B. 224mL

C. 336mL

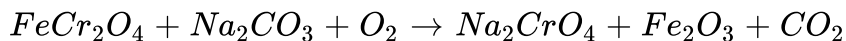
D. 448mL

Answer: d

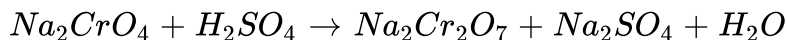
 [View Text Solution](#)

303. Potassium dichromate ($K_2Cr_2O_7$) is an orange coloured compound, very frequently used in laboratory as an oxidising agent as well as in a redox titration. It is generally prepared from chromite ($FeCr_2O_4$) ore according to the following reactions:

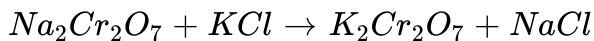
(a) Fusion of chromite ore with sodium carbonate in excess of air.



(b) Acidifying filtered sodium chromate solution with sulphuric acid.



(c) Treating sodium dichromate with potassium chloride.



Answer the following questions using above information.

If you are initially provided with 224 gm of pure chromite ore and 169.6gm of sodium carbonate, the minimum volume of air required at 1 atm and 273 K to consume at least one of the reactant completely, if air contains 20% by volume of oxygen gas is :

A. 156.8L

B. 196L

C. 28L

D. 152.4L

Answer: a

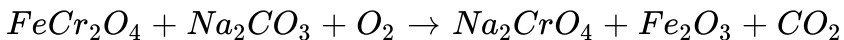


[View Text Solution](#)

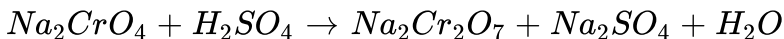
304. Potassium dichromate ($K_2Cr_2O_7$) is an orange coloured compound, very frequently used in laboratory as an oxidising agent as well as in a redox titration. It is generally prepared from chromit

($FeCr_2O_4$) ore according to the following reactions:

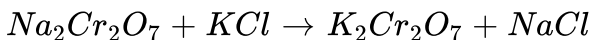
(a) Fusion of chromite ore with sodium carbonate in excess of air.



(b) Acidifying filtered sodium chromate solution with sulphuric acid.



(c) Treating sodium dichromate with potassium chloride.



Answer the following questions using above information.

If the number of moles of reactants available for reactions are: $\{FeCr_2O_4 = 0.25$ moles, $O_2 = 0.35$ moles, $Na_2CO_3 = 0.60$ moles, $H_2SO_4 = 0.2$ moles, $KCl = 0.1$ moles}, then the maximum number of moles of $K_2Cr_2O_7$, that can be produced is :

A. 0.05 moles

B. 0.1 moles

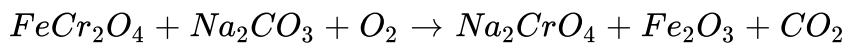
C. 0.2 moles

D. 0.5 moles

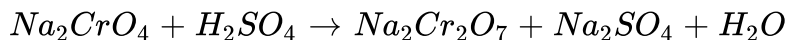
Answer: a

305. Potassium dichromate ($K_2Cr_2O_7$) is an orange coloured compound, very frequently used in laboratory as an oxidising agent as well as in a redox titration. It is generally prepared from chromite ($FeCr_2O_4$) ore according to the following reactions:

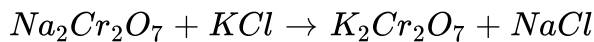
(a) Fusion of chromite ore with sodium carbonate in excess of air.



(b) Acidifying filtered sodium chromate solution with sulphuric acid.



(c) Treating sodium dichromate with potassium chloride.



Answer the following questions using above information.

If whole of the chromite ore given in the previous question gets consumed and sufficient amount of rest of the reactants are given, then the mass of $K_2Cr_2O_7$ obtained is :

A. 14.7gm

B. 7.35 gm

C. 73.5gm

D. 147gm

Answer: c

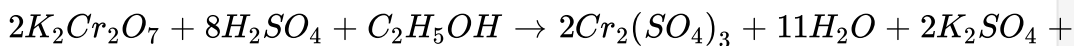


[View Text Solution](#)

306. Drinking is injurious of health. But for revenue purpose government has fixed some permissible value for alcohol . The permissible value for the alcohol content in the blood is 1 % mass . On analysis of blood sample of a driver of being drunk over than the permissible value , it was obtained that 60 gm sample reacted with 30 mL of $8M K_2Cr_2O_7$ (Acidic solution) .

Reaction

:



Assume $K_2Cr_2O_7$ reacts only with the alcohol present in blood .

Will the driver be prosecuted for drunken driving?

A. yes

B. no

C. may or may not

D. Date insufficient

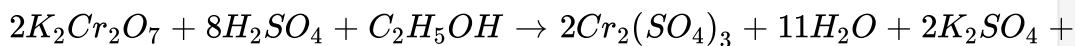
Answer: a



[View Text Solution](#)

307. Drinking is injurious of health. But for revenue purpose government has fixed some permissible value for alcohol . The permissible value for the alcohol content in the blood is 1 % mass . On analysis of blood sample of a driver of being drunk over than the permissible value , it was obtained that 60 gm sample reacted with 30 mL of $8M K_2Cr_2O_7$ (Acidic solution) .

Reaction



Assume $K_2Cr_2O_7$ reacts only with the alcohol present in blood .

What is the percentage of alcohol in the blood sample?

A. 0.092

B. 0.088

C. 0.008

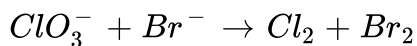
D. 0.072

Answer: a



[View Text Solution](#)

308. Question 1 and 2 should be answered using the unbalanced equation,



Which is the reducing agent?

A. ClO_3^-

B. Br^-

C. Cl_2

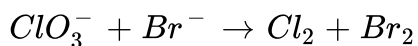
D. Br_2

Answer: b



[View Text Solution](#)

309. Question 1 and 2 should be answered using the unbalanced equation,



When this equation is balanced, what is the $\text{Br}^- / \text{ClO}_3^-$ ratio?

A. 1(1)

B. $\frac{2}{1}$

C. $\frac{3}{1}$

D. $\frac{5}{1}$

Answer: d

[Watch Video Solution](#)

310. Match Column-I (Compounds) with Column-II (Oxidation states of Nitrogen) and select using the code given below the lists:

Column-I		Column-II	
(p)	NaN_3	(1)	+ 5
(q)	N_2H_2	(2)	+ 2
(r)	NO	(3)	$-\frac{1}{3}$
(s)	N_2O_5	(4)	- 1

A. $\begin{matrix} p & q & r & s \\ 3 & 4 & 2 & 1 \end{matrix}$

B. $\begin{matrix} p & q & r & s \\ 4 & 3 & 2 & 1 \end{matrix}$

C. $\begin{matrix} p & q & r & s \\ 3 & 4 & 1 & 2 \end{matrix}$

D. $\begin{matrix} p & q & r & s \\ 4 & 3 & 1 & 2 \end{matrix}$

Answer: a



Watch Video Solution

Column-I		Column-II	
(a)	4.1 g H_2SO_3	(p)	200 mL of 0.5 N base is used for complete neutralization
(b)	4.9 g H_3PO_4	(q)	200 millimoles of oxygen atoms
(c)	4.5 g oxalic acid ($\text{H}_2\text{C}_2\text{O}_4$)	(r)	Central atom is in its highest oxidation state
(d)	5.3 g Na_2CO_3	(s)	May react with an oxidising agent

311.



[View Text Solution](#)

Column-I		Column-II	
(a)	$\text{Sn}^{+2} + \text{MnO}_4^-$ (acidic) 3.5 mole 1.2 mole	(p)	Amount of oxidant available decides the number of electrons transfer
(b)	$\text{H}_2\text{C}_2\text{O}_4 + \text{MnO}_4^-$ (acidic) 8.4 mole 3.6 mole	(q)	Amount of reductant available decides the number of electrons transfer
(c)	$\text{S}_2\text{O}_3^{2-} + \text{I}_2$ 7.2 mole 3.6 mole	(r)	Number of electrons involved per mole of oxidant > Number of electrons involved per mole of reductant
(d)	$\text{Fe}^{2+} + \text{Cr}_2\text{O}_7^{2-}$ (acidic) 9.2 mole 1.6 mole	(s)	Number of electrons involved per mole of oxidant < Number of electrons involved per mole of reductant

312.



[View Text Solution](#)

313. Match the following columns

Column-I (Underlined substance)		Column-II	
(a)	$\underline{S}_8 + 12NaOH \longrightarrow Na_2S + 2Na_2S_2O_3 + 6H_2O$	(p)	Act as only oxidizing agent
(b)	$\underline{K_4[Fe(CN)_6]} + FeCl_3 \longrightarrow KFe[Fe(CN)_6] + 3KCl$	(q)	Act as only reducing agent
(c)	$\underline{2KClO_3} \longrightarrow 2KCl + 3O_2$	(r)	Act as both oxidizing and reducing agent
(d)	$\underline{Sb_2O_3} + KIO_3 + 2HCl + 6H_2O \longrightarrow 2HSb(OH)_6 + ICl + KCl$	(s)	Act as neither oxidizing nor reducing agent

 Watch Video Solution

Column-I		Column-II	
(a)	$\underline{K_3[Fe(CN)_6]} + KOH + H_2O_2 \longrightarrow K_4[Fe(CN)_6] + H_2O + O_2$	(p)	Eq. wt of R.A. = $M/2$
(b)	$\underline{Cr(OH)_3} + NaOH + H_2O_2 \longrightarrow Na_2CrO_4 + H_2O$	(q)	Eq. wt of O.A. = $M/2$
(c)	$\underline{CaSO_4} + NH_3 + CO_2 + H_2O \longrightarrow CaCO_3 \downarrow + (NH_4)_2SO_4$	(r)	Non redox reaction
(d)	$\underline{3XeF_4} + H_2O \longrightarrow 2Xe + XeO_3 + O_2 + HF$	(s)	Redox reaction
		(t)	Eq. wt of O.A. = M

314.

(O.A.=Oxidising agent, R.A= Reducing agent, M= Molecular weight)

 [View Text Solution](#)

315. Match the following columns

Column-I		Column-II (No. of e^- involved in the reaction)	
(a)	$I_2 + SO_2 + 2H_2O \rightarrow SO_4^{2-} + 2I^- + 4H^+$	(p)	6
(b)	$3ClO^- + Br^- \rightarrow BrO_3^- + 3Cl^-$	(q)	12
(c)	$2ZnS + 3O_2 \rightarrow 2ZnO + 2SO_2$	(r)	1
(d)	$Br_2 + 2OH^- \rightarrow BrO^- + Br^- + H_2O$	(s)	2

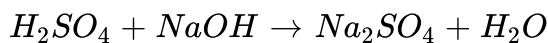
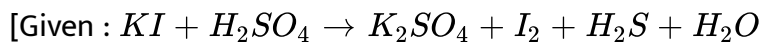
 [Watch Video Solution](#)

316. Calculate normality of a salt solution [of a metal sulphate] having concentration 21.6% w/v if its superoxide has 16% by mass of oxygen.

 [Watch Video Solution](#)

317. A 25 mL sample of H_2SO_4 of unknown molarity is reacted with KI solution of molarity 0.8 M and volume 80mL. The excess acid required 10

mL of 2 M NaOH solution for complete neutralisation. Calculate molarity of the H_2SO_4 taken:



 [Watch Video Solution](#)

318. 0.0026 M I_2 solution having unknown volume is reacted with excess of ferrous thiocyanate solution to form Fe_2O_3 , SO_4^{2-} , CN^- along with I^- . If all the sulphate ions formed are precipitated using $BaCl_2$ such that 16776 gm of $BaSO_4$ is obtained, calculate volume of I_2 consumed in litre.

(At. mass : Ba=137)

 [View Text Solution](#)

319. 100mL of H_2O_2 solution having volume strength 11.35 V is mixed with 500mL of 0.5M KI solution to liberate I_2 gas such that equilibria gets established. All the I_2 gas liberated is dissolved to form 500mL solution.

200ml of the solution required 50mL of $\frac{2}{3}$ M hypo solution. Calculate volume strength fo remaining H_2O_2 mixture. Round off your answer.

 [View Text Solution](#)

320. 100mL of 0.1M $KMnO_4$ is consumed in its titration with oxalic acid in presence of dil. HCl whose excess amount was taken. The $Cl_2(g)$ produced is reacted with excess of KI solution producing I_2 which required 170mL of 0.2 M hypo solution for complete reaction. Calculate millimoles of oxalic acid consumed.

 [Watch Video Solution](#)

321. 29.2% (w/w) HCl stock solution has a density of 1.25 g mL^{-1} . The molecular weight of HCl is 36.5 g mol^{-1} . The volume (mL) of stock solution required to prepare a 200mL solution of 0.4 M HCl is :

 [Watch Video Solution](#)

322. Calculate the normality of a solution obtained by mixing 50mL of 5M solution of $K_2Cr_2O_7$ and 50mL of 2 M $K_2Cr_2O_7$ in acidic medium.

 [Watch Video Solution](#)

323. Calculate the normality of a solution containing 13.4 g of sodium oxalate in 100mL solution.

 [Watch Video Solution](#)

324. One litre of acidified $KMnO_4$ solution containing 15.8g $KMnO_4$ is decolourized by passing sufficient SO_2 . If SO_2 is produced by FeS_2 , what is the amount of FeS_2 required to give desired SO_2 ?

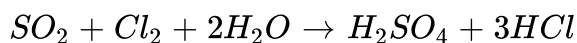
 [Watch Video Solution](#)

325. Calculate the percentage of available chlorine in a sample of 3.55g of bleaching powder which was dissolved in 100mL of water. 25mL of this

solution, on treatment with KI and dilute acid, required 20 mL of 0.125 N sodium thiosulphate solution.

 [Watch Video Solution](#)

326. In the following reaction, SO_4 acts as a reducing agent:



Find the equivalent weight of SO_2 .

 [Watch Video Solution](#)

327. It requires 40mL of 1 M Ce^{4+} to titrate 20mL of 1 M Sn^{2+} to Sn^{4+}

. What is the oxidation state of the cerium in the product?

 [Watch Video Solution](#)

328. 10mL of sulphuric acid solution (specific gravity= 1.84) contains 98% by weight of pure acid . Calculate the volume (in mL) of 2N NaOH solution

required to just neutralize the acid.

 [Watch Video Solution](#)

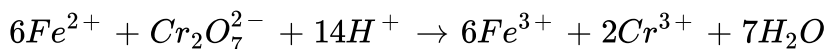
329. What is the percentage of free SO_3 in an oleum sample that is labelled as '104.5% H_2SO_4 '?

 [Watch Video Solution](#)

330. 1 g of oleum sample is dilute with water. The solution required 54 mL of 0.4 N NaOH for complete neutralization. Find the percentage of free SO_3 in the sample?

 [Watch Video Solution](#)

331. A 100 mL sample of water was treated to convert any iron present to Fe^{2+} . Addition of 25mL of 0.002M $K_2Cr_2O_7$ resulted in the reaction.



The excess $K_2Cr_2O_7$ was back-titrated with 7.5mL of .01M Fe^{2+} solution. Calculate the parts per million (ppm) of iron in the water sample.

 [Watch Video Solution](#)

332. A student performs a titration with different burettes and finds titre values of 25.2mL, 25.25mL, and 25.0mL. The number of significant figures in the average titre value is

 [Watch Video Solution](#)

333. Among the following, the number of elements showing only one non-zero oxidation state is:

O,Cl,F,N,P,Sn,Tl,Na,Ti

 [Watch Video Solution](#)

334. 0.2828 g of iron wire was dissolved in excess dilute H_2SO_4 and the solution was made upto 100mL. 20mL of this solution required 30mL of $\frac{N}{30} K_2Cr_2O_7$ solution for exact oxidation. Calculate percent purity of Fe in wire.

 [Watch Video Solution](#)

335. 2.6 g of an element X is reacted with an aqueous solution containing NaOH and $NaNO_3$ to yield Na_2XO_2 and NH_3 . NH_3 thus liberated is absorbed in 100mL of 0.11 M H_2SO_4 . The excess acid required 48 mL of 0.25 M NaOH for complete neutralisation. Find the atomic weight of X.

 [Watch Video Solution](#)

336. A sample consisting of chocolate-brown powder of PbO_2 is allowed to react with excess of KI and iodine liberated is reacted with N_2H_4 in another container. The volume of N_2 gas liberated from this second container at STP was measured out to be 1.135 litre. Find the volume (in L)

of decimolar NaOH solution required to dissolved PbO_2 completely and convert it to Na_2PbO_3 . (Assume all reactions are 100% complete).

 [Watch Video Solution](#)

337. A 1g sample of Fe_2O_3 solid of 55.2% purity is dissolved in acid and reduced by heating the solution with zinc dust. The resultant solution is cooled and made upto 100mL. An aliquot of 25mL of this solution requires 17mL of 0.0167M solution of an oxidant for titration. Calculate no.of electrons taken up by oxidant in the above titration.

 [Watch Video Solution](#)

338. A 0.56 g sample of limestones is dissolved in acid and the calcium is precipitated as calcium oxalate .The precipitate as calcium oxalate the prepcipate is filtered washed with water and dissolved in dil H_2SO_4 The solution required 40ml of 0.25NKmnO₄ solutions for titration .Calculate percentage of CaO in limestone sample.

 [Watch Video Solution](#)

 [Watch Video Solution](#)

339. 6 g of a mixture of ammonium sulphate and ammonium chloride was made up to 1000cc with water . 25cc of this solution was boiled with 50cc of $\frac{M}{10}$ sodium hydroxide until no more ammonia was evolved and it was then found that the excess of sodium hydroxide required 24.3 cc of $\frac{N}{10}$ hydrochloric acid for neutralisation. What was the mass percentage of ammonium chloride in the mixture?

 [Watch Video Solution](#)

340. An aq. Solution of 0.5 M $KMnO_4$ is divided into two parts. One part of it requires 125mL of 1.5M aq. Solution of oxalate ions in acidic medium, while another part requires 270mL of 0.5 M aq. Solution of iodide ions in neutral medium which are converted into I_2 only. Calculate total volume (mL) of initial $KMnO_4$ solution.

 [Watch Video Solution](#)

341. 1 mol of N_2H_4 loses 14 moles of electrons to form a new compound X. Assuming that the entire nitrogen appears in the new compound, what is the oxidation state of nitrogen in X?

 [Watch Video Solution](#)

342. 50mL aqueous solution of Fe_2SO_4 was neutralized with 100mL of 0.2 M $KMnO_4$ and 200mL of 1 M H_2SO_4 solution. Find the molarity of $FeSO_4$ solution.

 [Watch Video Solution](#)

343. The number of specie(s) which can react with acidified $KMnO_4$ out of the following specie(s) is /are $FeSO_4$, $Fe_2(SO_4)_3$, O_3 , FeC_2O_4 , $CuSO_4$, Cu_2S , H_2O_2 , NO_2^- , NO_3^- , SO_3^{2-}

 [Watch Video Solution](#)

344. Certain moles of HCN are completely oxidized by 25mL of $KMnO_4$ into CO_2 and NO_3^- . When all CO_2 is passed through lime water ($Ca(OH)_2$), 12.5gm of $CaCO_3$ is formed. What is molarity $KMnO_4$ used?

 [Watch Video Solution](#)

345. 1mL of unknown solution of H_2SO_4 is diluted upto 100mL and then its 25mL is titrated with 10mL of 0.2 M NaOH. The excess acid required 10mL of 0.1 M $Ba(OH)_2$ solution. Find molarity of original H_2SO_4 solution.

 [View Text Solution](#)

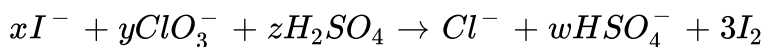
346. Find the number of chemical species in which underlined atom is in negative oxidation state $\underline{N}H_3$, $\underline{C}H_2Cl_2$, \underline{N}_2O , $H\underline{C}N$, $H\underline{N}O_2$, $\underline{C}N_2^{2-}$

 [Watch Video Solution](#)

347. 2.5g of a mixture containing $CaCO_3$, $Ca(HCO_3)_2$ and NaCl was dissolved in 100mL water and its 10mL portion required 10mL 0.05M H_2SO_4 solution to reach the phenolphthalein end point. Another 10mL portion of the same stock solution required 32.35 mL of the same acid solution to reach the methyl orange end point. Determine mass percentage ratio of $CaCO_3$ and $Ca(HCO_3)_2$ in the original mixture.

 [View Text Solution](#)

348. For the reaction



The value of w is :

 [Watch Video Solution](#)

349. α -D-glucopyranose reacts with periodate ion as follows:

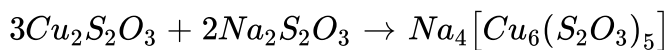
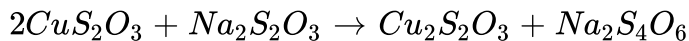
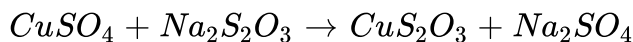


In a typical experiment, a 1 mL solution of α -D-Glucopyranose required

80mL 0.25 M periodate solution to reach the equivalence point. The solution is made free from formic acid and iodate ion by extraction and then treated with H_2O_2 , an oxidizing agent, oxidizing all formaldehyde into formic acid and finally titrated against 0.1 M NaOH solution. Titration required 40 mL of alkali to reach the equivalence point. Determine molarity of α -D-glucopyranose solution.

 [Watch Video Solution](#)

350. Maximum mole of $Na_4[Cu_6(S_2O_3)_5]$ which can be produced by 6 moles of $CuSO_4$ and 10 moles of $Na_2S_2O_3$ using following series of reaction-



Fill your answer to nearest integer.

 [Watch Video Solution](#)

351. If average oxidation state of O in CrO_5 is 'x'. Then find out the value

$|y|$. If $y = x \times \frac{10}{3}$.

 [Watch Video Solution](#)

352. A mixture of $H_2C_2O_4$ and $K_2C_2O_4$ required 0.2 N, 25mL $KMnO_4$ solution for complete oxidation. Same mixture needs 0.2 M, 20 mL NaOH solution for its complete neutralisation. Calculate mole percentage of $H_2C_2O_4$ in the given mixture.

 [Watch Video Solution](#)

353. The difference in the oxidation numbers of two types of sulphur atoms in $Na_2S_4O_6$ is.....

 [Watch Video Solution](#)

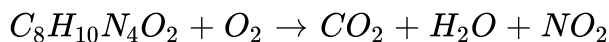
354. Calculate volume (in mL) of 3 M $KMnO_4$ in acidified condition required to neutralize 20mL of 2.0 M $H_2C_2O_4 \cdot 2KHC_2O_4 \cdot 3FeC_2O_4$

 [Watch Video Solution](#)

355. 6×10^{-3} mole $K_2Cr_2O_7$ reacts completely with 9×10^{-3} mole X^{n+} to give XO_3^- and Cr^{3+} . The value of n is :

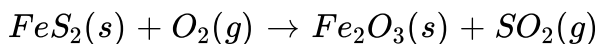
 [Watch Video Solution](#)

356. Find the number of electrons lost by $\frac{1}{6}$ molecule of caffeine in the given combustion reaction.



 [View Text Solution](#)

357. When 0.36 gm of iron pyrite (FeS_2) was heated strongly in air following reaction takes place



The $SO_2(g)$ produced was titrated with acidified $K_2Cr_2O_7$ solution.

Calculate the volume in mL of 1 M $K_2Cr_2O_7$ solution used in the redox titration. [Fe-56,S-32]

 [Watch Video Solution](#)

358. Given balanced chemical equation for oxidation of phosphorous (III) sulphide by nitric acid. The products include NO and SO_2



Find the value of $(a+b+c+d+e)$

 [Watch Video Solution](#)