



MATHS


BOOKS - NAVNEET MATHS (MARATHI ENGLISH)

QUADRILATERALS

Question Bank

1. Observe the figures given below and write their names :

(1)




Pentagon (Polygon
with five sides)



[Watch Video Solution](#)

2. Observe the figures given below and write their names :

(2)



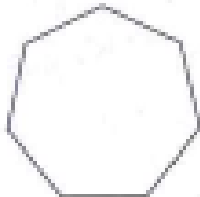
Hexagon (Polygon
with six sides)



[Watch Video Solution](#)

3. Observe the figures given below and write their names :

(3)



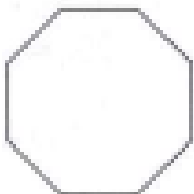
Heptagon (Polygon
with seven sides)



[Watch Video Solution](#)

4. Observe the figures given below and write their names :

(4)



Octagon (Polygon
with eight sides)



[Watch Video Solution](#)

5. Draw a quadrilateral \square XYZW and answer the following questions about it :

Name the pairs of opposite angles.



[Watch Video Solution](#)

6. Draw a quadrilateral \square XYZW and answer the following questions about it :

Name the pairs of opposite sides.



[Watch Video Solution](#)

7. Draw a quadrilateral \square XYZW and answer the following questions about it :

Name the pairs of adjacent sides.



[Watch Video Solution](#)

8. Draw a quadrilateral \square XYZW and answer the following questions about it :

Name the pairs of adjacent angles.



[Watch Video Solution](#)

9. Draw a quadrilateral \square XYZW and answer the following questions about it :

Name the diagonals of the quadrilateral.



[Watch Video Solution](#)

10. Draw a quadrilateral \square XYZW and answer the following questions about it :

Write the name of the quadrilateral in different ways.





[Watch Video Solution](#)

11. In the table below, write the number of sides the polygon has :

Write the number of sides the polygon has :

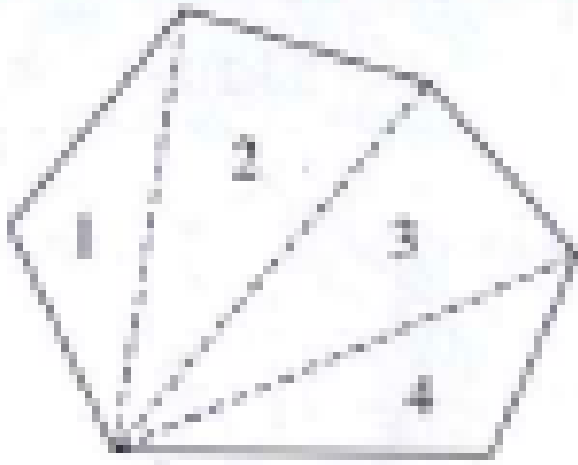
Names	Quadrilateral	Octagon	Pentagon	Heptagon	Hexagon
Number of sides	4	8	5	7	6



[Watch Video Solution](#)

12. Draw any polygon and divide it into triangular parts. Work out the sum of the

measures of the angles of the polygon.



Watch Video Solution