



## PHYSICS

### BOOKS - MTG PHYSICS (ENGLISH)

### MOVING CHARGES AND MAGNETISM

#### Mcq

1. When a magnetic compass needle is carried nearby to a straight wire carrying current, then

- I. the straight wire cause a noticeable deflection in the compass needle.
- II. the alignment of the needle is tangential to an imaginary circle with straight wire as its centre and has a plane perpendicular to the wire

A. (I) is correct

B. (II) is correct

C. both (I) and (II) are correct

D. neither (I) nor (II) is correct

**Answer: C**



**Watch Video Solution**

2. Which one of the following is not correct about Lorentz Force?

A. In presence of electric field  $\vec{E}(r)$  and magnetic field  $\vec{B}(r)$  the force

on a moving electric charge is  $\vec{F} = q \left[ \vec{E}(r) + \vec{v} \times \vec{B}(r) \right]$

B. The force, due to magnetic field on a negative charge is opposite to that on a positive charge.

C. The force due to magnetic field becomes zero if velocity and magnetic field are parallel or anti-parallel.

D. For a static charge the magnetic force is maximum.

**Answer: D**



**Watch Video Solution**

3. A strong magnetic field is applied on a stationary electron, then

- A. moves in the direction of the field.
- B. remained stationary.
- C. moves perpendicular to the direction of the field.
- D. moves opposite to the direction of the field.

**Answer: B**



**Watch Video Solution**

4. In an inertial frame of reference, the magnetic force on a moving charged particle is  $F$ . Its value in another inertial frame of reference will be

- A. remained same
- B. changed due to change in the amount of charge

C. changed due to change in velocity of charged particle

D. changed due to change in field direction

**Answer: C**



**Watch Video Solution**

5. The magnetic force  $\vec{F}$  on a current carrying conductor of length  $l$  in an external magnetic field  $\vec{B}$  is given by

A.  $\frac{I \times \vec{B}}{l}$

B.  $\frac{\vec{l} \times \vec{B}}{I}$

C.  $I(\vec{l} \times \vec{B})$

D.  $l^2 \vec{l} \times \vec{B}$

**Answer: C**



**Watch Video Solution**

6. A straight wire having mass of 1.2 kg and length of 1m carries a current of 5 A. If the wire is suspended in mid-air by a uniform horizontal magnetic field, then the magnitude of field is

A. 0.65T

B. 1.53T

C. 2.4T

D. 3.2T

**Answer: C**



**Watch Video Solution**

7. A conducting circular loop of radius  $r$  carries a constant current  $i$ . It is placed in a uniform magnetic field  $B$  such that  $B$  is perpendicular to the plane of loop. What is the magnetic force acting on the loop?

A.  $2\pi RIB$

B.  $2\pi Rl^2 B^3$

C.  $\pi R^2 IB$

D. zero

**Answer: D**



**Watch Video Solution**

8. A 2.5 m long straight wire having mass of 500 g is suspended in mid air by a uniform horizontal magnetic field B. If a current of 4 A is passing through the wire then the magnitude of the field is (Take  $g = 10ms^{-2}$ )

A. 0.5T

B. 0.6T

C. 0.25T

D. 0.8T

**Answer: A**

[Watch Video Solution](#)

9. A current of 10 ampere is flowing in a wire of length  $1.5m$ . A force of  $15N$  acts on it when it is placed in a uniform magnetic field of 2 tesla. The angle between the magnetic field and the direction of the current is

A.  $30^\circ$

B.  $45^\circ$

C.  $60^\circ$

D.  $90^\circ$

**Answer: A**

[Watch Video Solution](#)

10. The horizontal component of earth's magnetic field at a certain place is  $3.0 \times 10^{-5}T$  and having a direction from the geographic south to

geographic north. The force per unit length on a very long straight conductor carrying, a 1.2 A in east to west direction is

A.  $3.0 \times 10^{-5} Nm^{-1}$

B.  $3.2 \times 10^{-5} Nm^{-1}$

C.  $3.6 \times 10^{-5} Nm^{-1}$

D.  $3.8 \times 10^{-5} Nm^{-1}$

**Answer: C**



**Watch Video Solution**

**11.** An 8 cm long wire carrying a current of 10 A is placed inside a solenoid perpendicular to its axis. If the magnetic field inside the solenoid is 0.3 T, then magnetic force on the wire is

A. 0.14N

B. 0.24N

C. 0.34N



D. 0.44N

**Answer: B**



**Watch Video Solution**

**12.** The magnetic force per unit length on a wire carrying a current of 10 A and making an angle of  $45^\circ$  with the direction of a uniform magnetic field of 0.20 T is

A.  $2\sqrt{2}Nm^{-1}$

B.  $\frac{2}{\sqrt{2}}Nm^{-1}$

C.  $\frac{\sqrt{2}}{2}Nm^{-1}$

D.  $4\sqrt{2}Nm^{-1}$

**Answer: B**



**Watch Video Solution**

13. A circular coil of 20 turns and radius  $10\text{cm}$  is placed in a uniform magnetic field of  $0.1\text{T}$  normal to the plane of the coil. If the current in the coil is  $5.0\text{A}$  what is the average force on each electron in the coil due to the magnetic field (The coil is made of copper wire of cross-sectional area  $10^{-5}\text{m}^2$  and the free electron density in copper is given to be about  $10^{29}\text{m}^{-3}$ ).

A.  $2.5 \times 10^{-25}\text{N}$

B.  $5 \times 10^{-25}\text{N}$

C.  $4 \times 10^{-25}\text{N}$

D.  $3 \times 10^{-25}\text{N}$

**Answer: B**



**Watch Video Solution**

14. Which one of the following is correct statement about magnetic forces?

- A. Magnetic forces always obey Newton's third law
- B. Magnetic forces do not obey Newton's third law
- C. For very high current, magnetic forces obey Newton's third law
- D. Inside low magnetic field, magnetic forces obey Newton's third law

**Answer: B**



**Watch Video Solution**

**15.** A charged particle is moving on circular path with velocity  $v$  in a uniform magnetic field  $B$ , if the velocity of the charged particle is doubled and strength of magnetic field is halved, then radius becomes

- A. 8 times
- B. 4 times
- C. 2 times
- D. 16 times

**Answer: B**



**Watch Video Solution**

**16.** An electron of energy 1800 eV describes a circular path in magnetic field of flux density 0.4 T. The radius of path is  $(q = 1.6 \times 10^{-19} C, m_e = 9.1 \times 10^{-31} kg)$

A.  $2.58 \times 10^{-4} m$

B.  $3.58 \times 10^{-4} m$

C.  $2.58 \times 10^{-3} m$

D.  $3.58 \times 10^{-4} m$

**Answer: B**



**Watch Video Solution**

17. Two  $\alpha$ -particles have the ratio of their velocities as 3:2 on entering the field. If they move in different circular paths, then the ratio of the radii of their paths is

A. 2 : 3

B. 3 : 2

C. 9 : 4

D. 4 : 9

**Answer: B**



**Watch Video Solution**

18. When a positively charged particle enters a uniform magnetic field with uniform velocity, its trajectory can be

*a)* a straight line *b)* a circle *c)* a helix

A. (i) only

B. (i) or (ii)

C. (i) or (iii)

D. any one of (i),(ii) and (iii)

**Answer: D**



**Watch Video Solution**

**19.** Two particles  $X$  and  $Y$  with equal charges, after being accelerated through the same potential difference, enter a region of uniform magnetic field and describe circular paths of radii  $R_1$  and  $R_2$  respectively. The ratio of the mass of  $X$  to that of  $Y$  is

A.  $R_1 / R_2$

B.  $(R_1 / R_2)^2$

C.  $(R_2 / R_1)$

D.  $(R_2 / R_2)^2$

**Answer: B**



**Watch Video Solution**

20. An electron having momentum  $2.4 \times 10^{-23} \text{ kg m s}^{-1}$  enters a region of uniform magnetic field of 0.15 T. The field vector makes an angle of  $30^\circ$  with the initial velocity vector of the electron. The radius of the helical path of the electron in the field shall be

A. 2mm

B. 1mm

C.  $\frac{\sqrt{3}}{2}$  mm

D. 0.5mm

**Answer: D**



**Watch Video Solution**

21. A charged particle with charge  $q$  enters a region of constant, uniform and mutually orthogonal fields  $\vec{E}$  and  $\vec{B}$  with a velocity  $\vec{v}$  perpendicular to both  $\vec{E}$  and  $\vec{B}$ , and comes out without any change in magnitude or direction of  $\vec{v}$ . Then

A.  $\vec{v} = \vec{B} \times \vec{E} / E^2$

B.  $\vec{v} = \vec{E} \times \vec{B} / B^2$

C.  $\vec{v} = \vec{B} \times \vec{E} / B^2$

D.  $\vec{v} = \vec{E} \times \vec{B} / E^2$

**Answer: B**



**Watch Video Solution**

22. A charged particle would continue to move with a constant velocity in a region wherein, which of the following conditions is not correct?

A.  $E = 0, B \neq 0$



B.  $E \neq 0, B \neq 0$

C.  $E \neq 0, B = 0$

D.  $E = 0, B = 0$

**Answer: C**



**Watch Video Solution**

**23.** The cyclotron frequency  $\nu_c$  is given by

A.  $\frac{qB}{2\pi m}$

B.  $\frac{mB}{2\pi q}$

C.  $\frac{2\pi m}{qB}$

D.  $\frac{2\pi B}{qm}$

**Answer: A**



**Watch Video Solution**

24. A charged particle is moving in a cyclotron, what effect on the radius of path of this charged particle will occur when the frequency of the radio frequency field is doubled?

- A. It will also be doubled.
- B. It will be halved.
- C. It will be increased by four times.
- D. It will remain unchanged.

**Answer: D**



**Watch Video Solution**

25. A cubical region of space is filled with some uniform electric and magnetic field. An electron enters the cube across one of its faces with velocity  $v$  and a positron enters via opposite face with velocity  $-v$ . At this instant, which one of the following is not correct?

- A. The electric forces on both the particles cause identical acceleration.
- B. The magnetic forces on both the particles cause equal acceleration.
- C. Both particles gain or loose energy at the same rate.
- D. The motion of the centre of mass is determined by B alone.

**Answer: A**



**Watch Video Solution**

**26.** A cyclotron is operated at an oscillator frequency of 12 MHz and has a dee radius R 50 cm. What is the magnitude of the magnetic field needed for a proton to be accelerated in the cyclotron?

- A. 0.78 T
- B. 0.65 T
- C. 0.39 T
- D. 0.12 T

**Answer: A**



**Watch Video Solution**

27. If an electron is moving in a magnetic field of  $5.4 \times 10^{-4} T$  on a circular path of radius 32 cm having a frequency of 2.5 MHz, then its speed will be

A.  $8.56 \times 10^6 ms^{-1}$

B.  $5.024 \times 10^6 ms^{-1}$

C.  $8.56 \times 10^4 ms^{-1}$

D.  $5.024 \times 10^4 ms^{-1}$

**Answer: B**



**Watch Video Solution**

28. A proton and an  $\alpha$ -particle enter in a uniform magnetic field perpendicularly with same speed. The will be ratio of time periods of both particle  $\left(\frac{T_p}{T_\alpha}\right)$  will be

A. 1:2

B. 1:3

C. 2:1

D. 3:1

**Answer: A**



**Watch Video Solution**

29. A proton, a deuteron and  $\alpha$ -particle, whose kinetic energies are same, enter perpendicularly a uniform magnetic field. Compare the radii of their circular paths.

A. 1:1: $\sqrt{2}$

B.  $\sqrt{2}:1:1$

C.  $1:\sqrt{2}:1$

D.  $1:2:\sqrt{2}$

**Answer: C**



**Watch Video Solution**

**30.** An electron enters with a velocity  $\vec{v} = v_0 \hat{i}$  into a cubical region (faces parallel to coordinate planes) in which there are uniform electric and magnetic fields. The orbit of the electron is found to spiral down inside the cube in plane parallel to the x-y plane. Suggest a configuration of fields  $\vec{E}$  and  $\vec{B}$  that can lead to it.

A.  $\vec{E} = E_0 \hat{j}, \vec{B} = B_0 \hat{k}$

B.  $\vec{E} = E_0 \hat{i}, \vec{B} = B_0 \hat{k}$

C.  $\vec{E} = E_0 \hat{i}, \vec{B} = B_0 \hat{j}$

D.  $\vec{E} = E_0 \hat{j}, \vec{B} = B_0 \hat{j}$

**Answer: B**



**Watch Video Solution**

**31.** Magnetic field applied on a cyclotron is  $0.7T$  and radius of its dees is  $1.8m$ . What will be the energy of the emergent protons in  $MeV$ ? Mass of proton  $= 1.67 \times 10^{-27}kg$ .



**Watch Video Solution**

**32.** Which of the following is not correct about cyclotron?

- A. It is a machine to accelerate charged particles or ions to high energies.
- B. Cyclotron uses both electric and magnetic fields in combination to increase the energy of charged particles.

C. The operation of the cyclotron is based on the fact that the time for one revolution of an ion is independent of its speed or radius of its orbit.

D. The charged particles and ions in cyclotron can move on any arbitrary path.

**Answer: D**



**Watch Video Solution**

**33.** The operating magnetic field for accelerating protons in a cyclotron oscillator having frequency of 12 MHz is  $(q = 1.6 \times 10^{-19} C, m_p = 1.67 \times 10^{-27} kg \text{ and } 1MeV = 1.6 \times 10^{-13} J)$

A. 0.69T

B. 0.79T

C. 0.59T

D. 0.49T



**Answer: B**



**Watch Video Solution**

**34.** In the question number 34, the kinetic energy (in MeV) of the proton beam produced by the accelerator is (radius of dees = 60 cm)

A. 5

B. 6.5

C. 10.6

D. 12.6

**Answer: C**



**View Text Solution**

**35.** An electron is moving in a cyclotron at a speed of  $3.2 \times 10^7 \text{ ms}^{-1}$  in a magnetic field of  $5 \times 10^{-4} \text{ T}$  perpendicular to it. What is the frequency of

this electron? ( $q = 1.6 \times 10^{-19}C$ ,  $m_e = 9.1 \times 10^{-31}kg$ )

A.  $1.4 \times 10^5 Hz$

B.  $1.4 \times 10^7 Hz$

C.  $1.4 \times 10^6 Hz$

D.  $1.4 \times 10^9 Hz$

**Answer: B**



**Watch Video Solution**

**36.** A proton is accelerating on a cyclotron having oscillating frequency of 11 MHz in external magnetic field of 1 T. If the radius of its dees is 55 cm, then its kinetic energy (in MeV) is is ( $m_p = 1.67 \times 10^{-27}kg$ ,  $e = 1.6 \times 10^{-19}C$ )`

A. 13.36

B. 12.52

C. 14.89

Answer: D



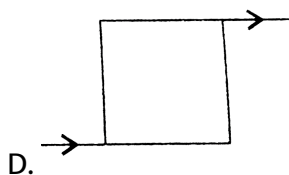
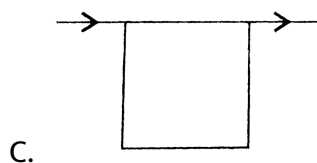
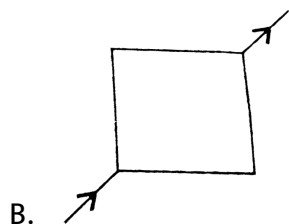
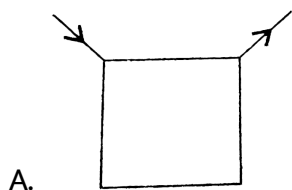
Watch Video Solution

37. If an electron is moving with velocity  $\vec{v}$  produces a magnetic field  $\vec{B}$ , then

- A. the direction of field  $\vec{B}$  will be same as the direction of velocity  $\vec{v}$ .
- B. the direction of field  $\vec{B}$  will be opposite to the direction of velocity  $\vec{v}$ .
- C. the direction of field  $\vec{B}$  will be perpendicular to the direction of velocity  $\vec{v}$ .
- D. the direction of field  $\vec{B}$  does not depend upon the direction of velocity  $\vec{v}$ .

Answer: C

38. Current flows through uniform square frames as shown. In which case is the magnetic field at the centre of the frame not zero ?



Answer: C

39. A circular loop of radius 3 cm is having a current of 12.5 A. The magnitude of magnetic field at a distance of 4 cm on its axis is

A.  $5.65 \times 10^{-5} T$

B.  $5.27 \times 10^{-5} T$

C.  $6.54 \times 10^{-5} T$

D.  $9.20 \times 10^{-5} T$

**Answer: A**



**Watch Video Solution**

40. A circular coil of wire consisting of 100 turns each of radius 9 cm carries a current of 0.4 A. The magnitude of the magnetic field at the centre of coil is  $[\mu_0 = 1256 \times 10^{-7} \text{ SI unit}]$

A.  $2.4 \times 10^{-4} T$

B.  $3.5 \times 10^{-4}T$

C.  $2.79 \times 10^{-4}T$

D.  $3 \times 10^{-4}T$

**Answer: C**



**Watch Video Solution**

**41.** The magnitude of the magnetic field at the centre of the tightly wound 150 turn coil of radius 12 cm carrying a current of 2 A is

A. 18G

B. 19.7G

C. 15.7G

D. 17.7G

**Answer: C**



**Watch Video Solution**

42. A tightly wound 90 turn coil of radius 15 cm has a magnetic field of  $4 \times 10^{-4} T$  at its centre. The current flowing through it is

A. 1.06A

B. 2.44A

C. 3.44A

D. 4.44A

**Answer: A**



**Watch Video Solution**

43. A 4 A current carrying loop consists of three identical quarter circles of radius 5 cm lying in the positive quadrants of the x-y, y-z and z-x planes with their centres at the origin joined together, value of B at the origin is

A.  $\frac{\mu_0}{10} (\hat{i} + \hat{j} - \hat{k}) T$

B.  $\frac{\mu_0}{10} \left( -\hat{i} + \hat{j} + \hat{k} \right) T$

C.  $\frac{\mu_0}{5} \left( \hat{i} + \hat{j} + \hat{k} \right) T$

D.  $10\mu_0 \left( \hat{i} + \hat{j} + \hat{k} \right) T$

**Answer: D**



**Watch Video Solution**

**44.** The electric current in a circular coil of two turns produced a magnetic induction of 0.2 T at its centre. The coil is unwound and then rewound into a circular coil of four turns. If same current flows in the coil, the magnetic induction at the centre of the coil now is

A. 0.2T

B. 0.4T

C. 0.6T

D. 0.8T



**Answer: D**



**Watch Video Solution**

**45.** Ampere's circuital law is given by

A.  $\oint \vec{H} \cdot d\vec{l} = \mu_0 I_{\text{enc}}$

B.  $\oint \vec{B} \cdot d\vec{l} = \mu_0 I_{\text{enc}}$

C.  $\oint \vec{B} \cdot d\vec{l} = \mu_0 J$

D.  $\oint \vec{H} \cdot d\vec{l} = \mu_0 J$

**Answer: B**



**Watch Video Solution**

**46.** Two identical current carrying coaxial loops, carry current  $I$  in an opposite sense. A simple amperian loop passes through both of them once, calling the loop as  $C$ , which of the option is correct ?

A.  $\oint_C \vec{B} \cdot d\vec{l} = \pm 2\mu_0 J$

B. the value of  $\oint_C \vec{B} \cdot d\vec{l}$  is independent of sense of C.

C. there may be a point on C where B and dl are parallel.

D. none of these

**Answer: B**



**Watch Video Solution**

**47.** A long straight wire in the horizontal plane carries a current of 75 A in north to south direction, magnitude and direction of field B at a point 3 m east of the wire is

A.  $4 \times 10^{-6} T$ , vertical up

B.  $5 \times 10^{-6} T$ , vertical down

C.  $5 \times 10^{-6} T$ , vertical up

D.  $4 \times 10^{-6} T$ , vertical down

**Answer: C**



**Watch Video Solution**

**48.** If a long straight wire carries a current of 40 A, then the magnitude of the field B at a point 15 cm away from the wire is

A.  $5.34 \times 10^{-5} T$

B.  $8.34 \times 10^{-5} T$

C.  $9.6 \times 10^{-5} T$

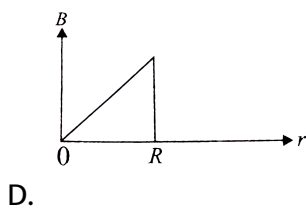
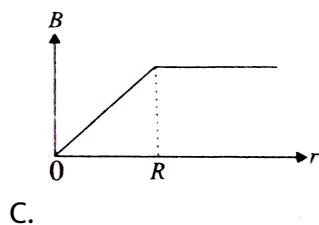
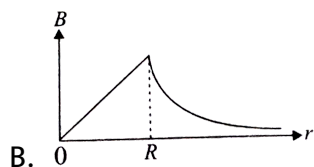
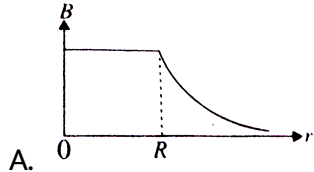
D.  $10.2 \times 10^{-5} T$

**Answer: A**



**Watch Video Solution**

**49.** The correct plot of the magnitude of magnetic field  $\vec{B}$  vs distance r from centre of the wire is, if the radius of wire is R



**Answer: B**



**Watch Video Solution**

**50.** A solenoid of length 0.6 m has a radius of 2 cm and is made up of 600 turns. If it carries a current of 4 A, then the magnitude of the magnetic field inside the solenoid is

A.  $6.024 \times 10^{-3}T$

B.  $8.024 \times 10^{-3}T$

C.  $5.024 \times 10^{-3}T$

D.  $7.024 \times 10^{-3}T$

**Answer: C**



**Watch Video Solution**

**51.** A solenoid of length  $50cm$ , having 100 turns carries a current of  $2 \cdot 5A$ . Find the magnetic field, (a) in the interior of the solenoid, (b) at one end of the solenoid.

Given  $\mu_0 = 4\pi \times 10^{-7}WbA^{-1}m^{-1}$ .

A.  $3.14 \times 10^{-4}T$

B.  $6.28 \times 10^{-4}T$

C.  $1.57 \times 10^{-4}T$

D.  $9.42 \times 10^{-4}T$

**Answer: A**



**Watch Video Solution**

**52.** A 90 cm long solenoid has six layers of windings of 450 turns each. If the diameter of solenoid is 2.2 cm and current carried is 6 A, then the magnitude of magnetic field inside the solenoid, near its centre is

A.  $50\pi G$

B.  $60\pi G$

C.  $72\pi G$

D.  $80\pi G$

**Answer: C**



**Watch Video Solution**

**53.** Which of the following statement is correct?

- A. The magnetic field in the open space inside the toroid is constant.
- B. The magnetic field in the open space exterior to the toroid is constant.
- C. The magnetic field inside the core of toroid is constant.
- D. The magnetic field inside the core of toroid is zero.

**Answer: C**



**Watch Video Solution**

**54.** The inner and outer radius of a toroid core are 28 cm and 29 cm respectively and around the core 3700 turns of a wire are wounded. If the current in the wire is 10 A, then the magnetic field inside the core of the toroid is

A.  $2.60 \times 10^{-2} T$

B.  $2.60 \times 10^{-3} T$

C.  $4.52 \times 10^{-2} T$

D.  $4.52 \times 10^{-3}T$

**Answer: A**



**Watch Video Solution**

**55.** The nature of parallel and anti-parallel currents are

- A. parallel currents repel and antiparallel currents attract.
- B. parallel currents attract and antiparallel currents repel.
- C. both currents attract.
- D. both currents repel.

**Answer: B**



**Watch Video Solution**



56. Two parallel wires 2 m apart carry currents of 2 A and 5 A respectively in same direction, the force per unit length acting between these two wires is

A.  $2 \times 10^{-6} Nm^{-1}$

B.  $3 \times 10^{-6} Nm^{-1}$

C.  $1 \times 10^{-6} Nm^{-1}$

D.  $4 \times 10^{-6} Nm^{-1}$

**Answer: C**



**Watch Video Solution**

57. Two long and parallel straight wires A and B are carrying currents of 4A and 7A in the same directions are separated by a distance of 5cm. The force acting on a 8cm section of wire A is

A.  $3 \times 10^{-6} N$

B.  $6 \times 10^{-6} N$

C.  $9 \times 10^{-6} N$

D.  $12 \times 10^{-6} N$

**Answer: C**



**Watch Video Solution**

**58.** A conductor of length 2 m carrying current 2 A is held parallel to an infinitely long conductor carrying current of 12 A at a distance of 100 mm, the force on small conductor is

A.  $8.6 \times 10^{-5} N$

B.  $6.6 \times 10^{-5} N$

C.  $7.6 \times 10^{-5} N$

D.  $9.6 \times 10^{-5} N$

**Answer: D**

[Watch Video Solution](#)

59. Two straight wires A and B of lengths 10 m and 12 m carrying currents of 4.0 A and 6.0 A respectively in opposite direction, lie parallel to each other at a distance of 3.0 cm. The force on a 15 cm section of the wire B near its centre is

A.  $2.4 \times 10^{-5} N$ , attractive

B.  $2.4 \times 10^{-5} N$ , repulsive

C.  $1.2 \times 10^{-5} N$ , attractive

D.  $1.2 \times 10^{-5} N$ , attractive

**Answer: B**

[Watch Video Solution](#)

60. A long straight wire carrying current of 30 A rests on a table. Another wire AB of length 1 m, mass 3 g carries the same current but in the

opposite direction, the wire AB is free to slide up and down. The height upto which AB will rise is

- A. 0.6 cm
- B. 0.7 cm
- C. 0.4 cm
- D. 0.5 cm

**Answer: A**



**Watch Video Solution**

**61.** The magnetic moment of a current  $I$  carrying circular coil of radius  $r$  and number of turns  $N$  varies as

- A.  $\frac{1}{r^2}$
- B.  $\frac{1}{r}$
- C.  $r$

D.  $r^2$

**Answer: D**



**Watch Video Solution**

**62.** A 200 turn closely wound circular coil of radius 15 cm carries a current of 4 A. The magnetic moment of this coil is

A.  $36.5Am^2$

B.  $56.5Am^2$

C.  $66.5Am^2$

D.  $108Am^2$

**Answer: B**



**Watch Video Solution**

63. The magnetic moment associated with a circular coil of 35 turns and radius 25 cm, if it carries a current of 11 A is

A.  $72.2Am^2$

B.  $70.5Am^2$

C.  $74.56Am^2$

D.  $75.56Am^2$

**Answer: D**



**Watch Video Solution**

64. Magnetic field at the centre of a circular loop of area A carrying current I is B. What is the magnetic moment of this loop?

A.  $\frac{(BA)^2}{\mu_0\pi}$

B.  $\frac{BA\sqrt{A}}{\mu_0}$

C.  $\frac{BA\sqrt{A}}{\mu_0\pi}$

D.  $\frac{2BA\sqrt{A}}{\mu_0\sqrt{\pi}}$

**Answer: D**



**Watch Video Solution**

**65.** A short bar magnet has a magnetic moment of  $0.65\text{ T J}^{-1}$ , then the magnitude and direction of the magnetic field produced by the magnet at a distance 8 cm from the centre of magnet on the axis is

- A.  $2.5 \times 10^{-4}\text{ T}$ , along NS direction
- B.  $2.5 \times 10^{-4}\text{ T}$ , along SN direction
- C.  $4.5 \times 10^{-4}\text{ T}$ , along NS direction
- D.  $4.5 \times 10^{-4}\text{ T}$ , along NS direction

**Answer: B**



**Watch Video Solution**

66. A circular coil of radius 10 cm having 100 turns carries a current of 3.2

A. The magnetic field at the center of the coil is

A.  $2.01 \times 10^{-3} T$

B.  $5.64 \times 10^{-3} T$

C.  $2.64 \times 10^{-3} T$

D.  $5.64 \times 10^{-3} T$

**Answer: A**



**Watch Video Solution**

67. In the question number 73, for the coil given the magnetic moment is

A.  $12.95 Am^2$

B.  $25.79 Am^2$

C.  $10.05 Am^2$

D.  $24.79 Am^2$



**Answer: C**



**Watch Video Solution**

**68.** In the question number 73, the given coil is placed in a vertical plane and is free to rotate about a horizontal axis which coincides with its diameter. A uniform magnetic field of 5T in the horizontal direction exists such that initially the axis of the coil is in direction of the field. The coil rotates through an angle of  $60^\circ$  under the influence of magnetic field. The magnitude of torque on the coil in the final position is

A. 25 N m

B.  $25\sqrt{3}Nm$

C. 40 N m

D.  $40\sqrt{3}Nm$

**Answer: B**



**View Text Solution**

69. A current carrying loop is placed in a uniform magnetic field. The torque acting on it does not depend upon

- A. area of loop
- B. value of current
- C. magnetic field
- D. None of these

**Answer: D**



**Watch Video Solution**

70. A circular coil of 70 turns and radius 5 cm carrying a current of 8 A is suspended vertically in a uniform horizontal magnetic field of magnitude 1.5 T. The field lines make an angle of  $30^\circ$  with the normal of the coil then the magnitude of the counter torque that must be applied to prevent the coil from turning is

A. 33 Nm

B. 3.3 Nm

C.  $3.3 \times 10^{-2} Nm$

D.  $3.3 \times 10^{-4} Nm$

**Answer: B**



**Watch Video Solution**

**71.** A circular coil of 25 turns and radius 12 cm is placed in a uniform magnetic field of 0.5 T normal to the plane of the coil. If the current in the coil is 6 A then total torque acting on the coil is

A. zero

B. 3.4 Nm

C. 3.8 Nm

D. 4.4 Nm

**Answer: A**



**Watch Video Solution**

**72.** The final torque on a coil having magnetic moment  $25 \text{ A m}^2$  in a  $5 \text{ T}$  uniform external magnetic field, if the coil rotates through an angle of  $60^\circ$  under the influence of the magnetic field is

A.  $216.5 \text{ Nm}$

B.  $108.25 \text{ Nm}$

C.  $102.5 \text{ Nm}$

D.  $258.1 \text{ Nm}$

**Answer: B**



**Watch Video Solution**

**73.** A square coil of side  $10\text{cm}$  consists of 20 turns and carries a current of 12A. The coil is suspended vertically and normal to the plane of the coil makes an angle of  $30^\circ$  with the direction of a uniform horizontal magnetic field of magnitude  $0.80\text{T}$ . What is the magnitude of torque experienced by the coil?

A. 1.6 N m

B. 1.2 N m

C. 1.4 N m

D. 1.8 N m

**Answer: A**



**Watch Video Solution**

**74.** A coil having magnetic moment  $15\text{ A m}^2$  placed in a uniform magnetic field of 4 T in the horizontal direction exists such that initially the axis of coil is in the direction of the field. If the coil is rotated by  $45^\circ$  and the

moment of inertia of the coil is  $0.5 \text{ kg m}^2$  then the angular speed acquired by the coil is

A.  $20 \text{ rad s}^{-1}$

B.  $10 \text{ rad s}^{-1}$

C.  $8.34 \text{ rad s}^{-1}$

D.  $4.5 \text{ rad s}^{-1}$

**Answer: C**



**Watch Video Solution**

**75.** The gyromagnetic ratio of an electron in sodium atom is

A. depending upon the atomic number of the atom

B. depending upon the shell number of the atom

C. independent of that orbit it is in

D. having positive value

**Answer: C**



**Watch Video Solution**

**76.** Gyromagnetic ratio is the ratio of magnetic moment ( $\mu_l$ ) to the orbital angular momentum ( $l$ ). Its numerical value for an electron is given by

A.  $8.8 \times 10^{-12} C \text{ kg}^{-1}$

B.  $8.8 \times 10^{10} C \text{ kg}^{-1}$

C.  $1.6 \times 10^{-19} C \text{ kg}^{-1}$

D.  $6.67 \times 10^{11} C \text{ kg}^{-1}$

**Answer: B**



**Watch Video Solution**

**77.** What is the correct value of Bohr magneton?

A.  $8.89 \times 10^{-24} \text{ Am}^2$

B.  $9.27 \times 10^{-24} \text{ Am}^2$

C.  $5.56 \times 10^{-24} \text{ Am}^2$

D.  $9.27 \times 10^{-28} \text{ Am}^2$

**Answer: B**



**Watch Video Solution**

**78.** In a moving coil galvanometer the deflection ( $\phi$ ) on the scale by a pointer attached to the spring is

A.  $\left( \frac{NA}{kB} \right) I$

B.  $\left( \frac{N}{kAB} \right) I$

C.  $\left( \frac{NAB}{k} \right) I$

D.  $\left( \frac{NAB}{kI} \right)$

**Answer: C**



79. Two moving coil metres  $M_1$  and  $M_2$  have the following particular

$$R_1 = 10\Omega, N_1 = 30, A_1 = 3.6 \times 10^{-3}m^2, B_1 = 0.25T,$$

$$R_2 = 14\Omega, N_2 = 42, A_2 = 1.8 \times 10^{-3}m^2, B_2 = 0.50T$$

The spring constants are identical for the two metres. What is the ratio of current sensitivity and voltage sensitivity of  $M_2$  to  $M_1$ ?

A. 1.4, 1

B. 1.4, 0

C. 2.8, 2

D. 2.8, 0

**Answer: A**

**80.** If the current sensitivity of a galvanometer is doubled, then its voltage sensitivity will be

- A. doubled
- B. halved
- C. unchanged
- D. four times

**Answer: C**



**Watch Video Solution**

**81.** A galvanometer can be converted into an ammeter by connecting

- A. introducing a shunt resistance of large value in series.
- B. introducing a shunt resistance of small value in parallel.
- C. introducing a resistance of small value in series.
- D. introducing a resistance of large value in parallel.

**Answer: B**



**Watch Video Solution**

**82.** A galvanometer of resistance  $70\Omega$ , is converted to an ammeter by a shunt resistance  $r_3 = 0.03\Omega$ . The value of its resistance will become

A.  $0.025\Omega$

B.  $0.022\Omega$

C.  $0.035\Omega$

D.  $0.030\Omega$

**Answer: D**



**Watch Video Solution**

**83.** If the galvanometer current is  $10\text{ mA}$ , resistance of the galvanometer is  $40\Omega$  and shunt of  $2\Omega$  is connected to the galvanometer, the maximum

current which can be measured by this ammeter is

A. 0.21A

B. 2.1A

C. 210A

D. 21A

**Answer: A**



**Watch Video Solution**

**84.** A galvanometer of resistance  $40\Omega$  gives a deflection of 5 divisions per mA. There are 50 divisions on the scale. The maximum current that can pass through it when a shunt resistance of  $2\Omega$  is connected is

A. 210mA

B. 155 Ma

C. 420mA

D. 75 Ma

**Answer: A**



**Watch Video Solution**

85. A galvanometer having a resistance of  $50\Omega$ , gives a full scale deflection for a current of 0.05 A. The length (in metres) of a resistance wire of area of cross section  $3 \times 10^{-2} \text{ cm}^2$  that can be used to convert the galvanometer into an ammeter which can read a maximum of 5 A current is (Specific resistance of the wire  $= 5 \times 10^{-7} \Omega \text{ m}$ )

A. 9

B. 6

C. 3

D. 1.5

**Answer: C**



**Watch Video Solution**

**86.** The conversion of a moving coil galvanometer into a voltmeter is done by

- A. introducing a resistance of large value in series
- B. introducing a resistance of small value in parallel
- C. introducing a resistance of large value in parallel
- D. introducing a resistance of small value in series

**Answer: A**



**Watch Video Solution**

**87.** The resistance of a galvanometer is  $10\Omega$ . It gives full-scale deflections when  $1mA$  current is passed. The resistance connected in series for converting it into a voltmeter of  $2.5V$  will be

- A.  $24.9\Omega$

B.  $249\Omega$

C.  $2490\Omega$

D.  $24900\Omega$

**Answer: C**



**Watch Video Solution**

**88.** A galvanometer coil has a resistance of  $15\Omega$  and the metre shows full scale deflection for a current of 4 mA. To convert the meter into a voltmeter of range 0 to 18 V, the required resistance is

A.  $5885\Omega$  in series

B.  $4485\Omega$  in series

C.  $5885\Omega$  in series

D.  $4485\Omega$  in series

**Answer: B**

[Watch Video Solution](#)

**89.** A galvanometer of resistance  $50\Omega$  is connected to a battery of  $3V$  along with resistance of  $2950\Omega$  in series. A full scale deflection of 30 divisions is obtained in the galvanometer. In order to reduce this deflection to 20 division the above series resistance should be

A.  $6050\Omega$

B.  $4450\Omega$

C.  $5050\Omega$

D.  $5550\Omega$

**Answer: B**

[Watch Video Solution](#)

**90.** The range of voltmeter of resistance  $300\Omega$  is  $5\text{ V}$ . The resistance to be connected to convert it into an ammeter of range  $5\text{ A}$  is



A.  $1\Omega$  in series

B.  $1\Omega$  in parallel

C.  $0.1\Omega$  in series

D.  $0.1\Omega$  in parallel

**Answer: B**



**Watch Video Solution**

**Hots**

1. A steady current  $I$  goes through a wire loop  $PQR$  having shape of a right angle triangle with  $PQ = 3x$ ,  $PR = 4x$  and  $QR = 5x$ . If the magnitude of the magnetic field at  $P$  due to this loop is  $k\left(\frac{\mu_0 I}{48\pi x}\right)$ , find the value of  $K$ .

A. 1

B. 5

C. 10

D. 7

**Answer: D**



**Watch Video Solution**

2. A current  $I$  flows in a rectangularly shaped wire whose centre lies at  $(x_0, 0, 0)$  and whose vertices are located at the points A  $(x_0 + d, -a, -b)$ , B  $(x_0 - d, a, -b)$ , C  $(x_0 - d, a, +b)$  and D  $(x_0 + d, -a, +b)$ , respectively. Assume that  $a, b, d \ll x_0$ . Find the magnitude of magnetic dipole moment vector of the rectangular wire frame in  $J/T$ . (Given,  $b=10$  m,  $I=0.01$  A,  $d=4$  m,  $a=3$  m).

A.  $2JT^{-1}$

B.  $4JT^{-1}$

C.  $3JT^{-1}$

D.  $9JT^{-1}$

**Answer: A**



**Watch Video Solution**

3. A current  $I=10\text{A}$  flows in a ring of radius  $r_0 = 15\text{cm}$  made of a very thin wire. The tensile strength of the wire is equal to  $T=1.5\text{N}$ . The ring is placed in a magnetic field, which is perpendicular to the plane of the ring so that the forces tend to break the ring. Find  $B$  ( in T) at which the ring is broken.

A. 0.5 T

B. 1 T

C. 2 T

D. 2.5 T

**Answer: B**



**Watch Video Solution**

4. Inside a long straight uniform wire of round cross-section, there is a long round cylindrical cavity whose axis is parallel to the axis of the wire and displaced from the latter by a distance  $l$ . A direct current of density  $j$  flows along the wire. Find the magnetic induction inside the cavity. Consider, in particular, the case  $l = 0$ .



A. 0

B.  $\frac{1}{2}\mu_0 \vec{J} \times \vec{d}$

C.  $\mu_0 \vec{J} \times \vec{d}$

D.  $\frac{3}{2}\mu_0 \vec{J} \times \vec{d}$

**Answer: B**



**Watch Video Solution**

5. A galvanometer has a current sensitivity of 1 mA per division. A variable shunt is connected across the galvanometer and the combination is put

in series with a resistance of  $500\Omega$  and cell of internal resistance  $1\Omega$ . It gives a deflection of 5 division for shunt of 5 ohm and 20 division for shunt of 25 ohm. The emf of cell is

A. 47.1 V

B. 57.1 V

C. 67.1 V

D. 77.1 V

**Answer: A**



**Watch Video Solution**

### Exemplar Problems

1. Two charged particles traverse identical helical paths in a completely opposite sense in a uniform magnetic field  $\vec{B} = B_0 \hat{K}$

A. They have equal  $z$  – components of momenta.

- B. They must have equal charges.
- C. They necessarily represent a particle-antiparticle pair.
- D. The charge to mass ratio satisfy:

$$\left(\frac{e}{m}\right)_1 + \left(\frac{e}{m}\right)_2 = 0.$$

**Answer: D**



**Watch Video Solution**

2. Biot-Savart law indicates that the moving electrons (velocity  $\vec{v}$ ) produce a magnetic field  $\vec{B}$  such that

A.  $\vec{B} \perp \vec{v}$

B.  $\vec{B} \parallel \vec{v}$

C. it obeys inverse cube law.

D. it is along the line joining the electron and point of observation.

**Answer: A**

3. A current carrying circular loop of radius  $R$  is placed in the  $x$ - $y$  plane with centre at the origin. Half of the loop with  $x > 0$  is now bent so that it now lies in the  $y$ - $z$  plane.

- A. The magnitude of magnetic moment now diminishes.
- B. The magnetic moment does not change.
- C. The magnitude of  $\vec{B}$  at  $(0, 0, z)$ ,  $z > R$  increases.
- D. The magnitude of  $\vec{B}$  at  $(0, 0, z)$ ,  $z > R$  is unchanged.

**Answer: A**

4. An electron is projected with uniform velocity along the axis of a current carrying long solenoid. Which of the following is true?

- A. The electron will be accelerated along the axis.
- B. The electron path will be circular about the axis.
- C. The electron will experience a force at  $45^\circ$  to the axis and hence execute a helical path.
- D. The electron will continue to move with uniform velocity along the axis of the solenoid.

**Answer: D**



**Watch Video Solution**

**5. In a cyclotron, a charged particle**

- A. undergoes acceleration all the time.
- B. speeds up between the dees because of the magnetic field.
- C. speeds up in a dee.
- D. slows down within a dee and speeds up between dees.



**Answer: A**



**Watch Video Solution**

6. A circular current loop of magnetic moment  $M$  is in an arbitrary orientation in an external magnetic field  $\vec{B}$ . The work done to rotate the loop by  $30^\circ$  about an axis perpendicular to its plane is :

A.  $MB$

B.  $\sqrt{3}\frac{MB}{2}$

C.  $\frac{MB}{2}$

D. zero.

**Answer: D**



**Watch Video Solution**

**Assertion Reason**

1. Assertion : Electron revolves around a positively charged nucleus like a planet revolves around the sun.

Reason : The force acting in both the cases is of same kind.

A. If both assertion and reason are true and reason is the correct explanation of assertion.

B. If both assertion and reason are true but reason is the correct explanation of assertion.

C. If assertion is true but reason is false

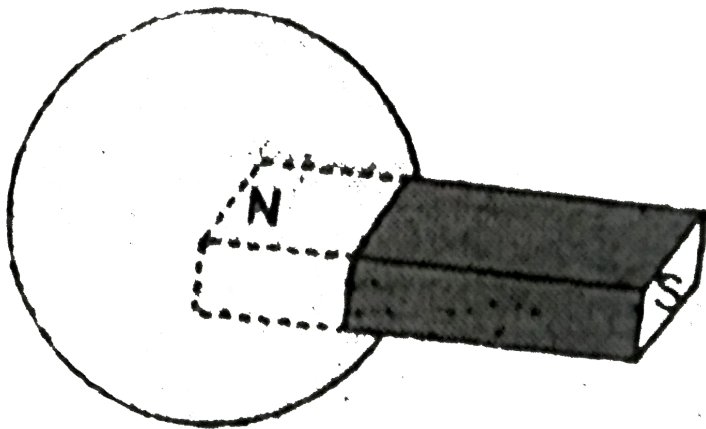
D. If both assertion and reason are false.

**Answer: C**



**Watch Video Solution**

2. Statement-1 The net magnetic flux through a spherical surface enclosing north pole of a bar magnet as zero



Statement-2 Magnetic field lines always form closed loops

- A. If both assertion and reason are true and reason is the correct explanation of assertion.
- B. If both assertion and reason are true but reason is the correct explanation of assertion.
- C. If assertion is true but reason is false
- D. If both assertion and reason are false.

**Answer: B**



**Watch Video Solution**

**3. Assertion :** Magnetic field interacts with a moving charge and not with a stationary charge.

**Reason :** A moving charge produces a magnetic field.

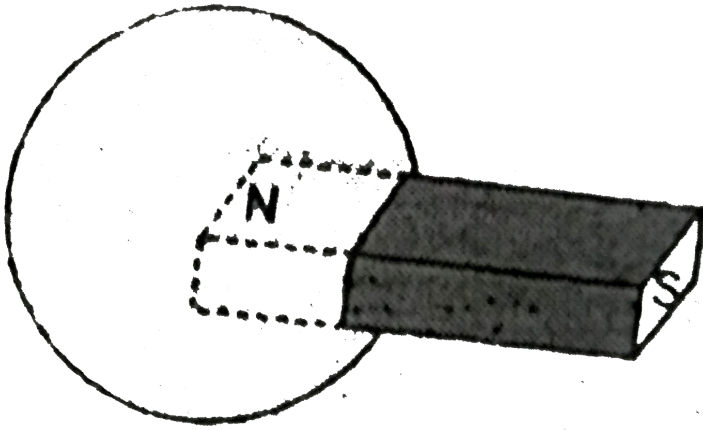
- A. If both assertion and reason are true and reason is the correct explanation of assertion.
- B. If both assertion and reason are true but reason is the correct explanation of assertion.
- C. If assertion is true but reason is false
- D. If both assertion and reason are false.

**Answer: A**



**Watch Video Solution**

**4. Statement-1** The net magnetic flux through a spherical surface enclosing north pole of a bar magnet as zero



Statement-2 Magnetic field lines always form closed loops

- A. If both assertion and reason are true and reason is the correct explanation of assertion.
- B. If both assertion and reason are true but reason is the correct explanation of assertion.
- C. If assertion is true but reason is false
- D. If both assertion and reason are false.

**Answer: A**



**Watch Video Solution**

5. Assertion: The energy of charged particle moving in uniform magnetic field does not change.

Reason: Work done by magnetic field on the charge is zero.

- A. If both assertion and reason are true and reason is the correct explanation of assertion.
- B. If both assertion and reason are true but reason is the correct explanation of assertion.
- C. If assertion is true but reason is false
- D. If both assertion and reason are false.

**Answer: A**



**Watch Video Solution**

6. Assertion: Cyclotron does not accelerate.

Reason: Mass of the electron is very small.

- A. If both assertion and reason are true and reason is the correct explanation of assertion.
- B. If both assertion and reason are true but reason is the correct explanation of assertion.
- C. If assertion is true but reason is false
- D. If both assertion and reason are false.

**Answer: A**



**Watch Video Solution**

7. Ampere's circuital law is given by



**Watch Video Solution**

**8. MAGNETIC FIELD DUE TO CURRENT CARRYING SOLENOID**

- A. If both assertion and reason are true and reason is the correct explanation of assertion.
- B. If both assertion and reason are true but reason is the correct explanation of assertion.
- C. If assertion is true but reason is false
- D. If both assertion and reason are false.

**Answer: B**



**View Text Solution**

**9. Statement1:** The magnetic field at the ends of very long current carrying solenoid is half of that at the centre.

**Statement2:** If the solenoid is sufficiently long, the field within it is uniform.

- A. If both assertion and reason are true and reason is the correct explanation of assertion.



B. If both assertion and reason are true but reason is the correct explanation of assertion.

C. If assertion is true but reason is false

D. If both assertion and reason are false.

**Answer: B**



**Watch Video Solution**

**10.** The two linear parallel conductors carrying currents in the opposite direction.....each other.

A. If both assertion and reason are true and reason is the correct explanation of assertion.

B. If both assertion and reason are true but reason is the correct explanation of assertion.

C. If assertion is true but reason is false

D. If both assertion and reason are false.

**Answer: D**



**Watch Video Solution**

**11.** Assertion: When a magnetic dipole is placed in a non-uniform magnetic field, only a torque acts on the dipole.

Reason: Force would also acts on dipole if magnetic field were uniform.

- A. If both assertion and reason are true and reason is the correct explanation of assertion.
- B. If both assertion and reason are true but reason is the correct explanation of assertion.
- C. If assertion is true but reason is false
- D. If both assertion and reason are false.

**Answer: D**

[Watch Video Solution](#)

**12. Assertion :** The net magnetic force on a current loop in a uniform magnetic field is zero but torque may or may not be zero.

**Reason :** Torque on a current carrying coil in a magnetic field is given by

$$\vec{\tau} = nI(\vec{A} \times \vec{B}).$$

- A. If both assertion and reason are true and reason is the correct explanation of assertion.
- B. If both assertion and reason are true but reason is not the correct explanation of assertion.
- C. If assertion is true but reason is false
- D. If both assertion and reason are false.

**Answer: B**

[Watch Video Solution](#)

13. *Assertion*: current sensitivity of a galvanometer is directly proportional to the current through the coil.

*Reason*: Voltage sensitivity is inversely proportional to voltage.

- A. If both assertion and reason are true and reason is the correct explanation of assertion.
- B. If both assertion and reason are true but reason is the correct explanation of assertion.
- C. If assertion is true but reason is false
- D. If both assertion is false but reason is true

**Answer: D**



**Watch Video Solution**

14. Write two reasons, why a galvanometer cannot be used as such to measure current in a given circuit.

- A. If both assertion and reason are true and reason is the correct explanation of assertion.
- B. If both assertion and reason are true but reason is the correct explanation of assertion.
- C. If assertion is true but reason is false
- D. If both assertion and reason are false.

**Answer: A**



**Watch Video Solution**

**15.** A moving coil galvanometer can be converted into an ammeter by



**Watch Video Solution**

1. When a magnetic compass needle is carried nearby to a straight wire carrying current, then

- I. the straight wire cause a noticeable deflection in the compass needle.
- II. the alignment of the needle is tangential to an imaginary circle with straight wire as its centre and has a plane perpendicular to the wire

- A. (I) is correct
- B. (II) is correct
- C. both (I) and (II) are correct
- D. neither (I) nor (II) is correct

**Answer: C**



**Watch Video Solution**

2. Which one of the following is not correct about Lorentz Force?

- A. In presence of electric field  $\vec{E}(r)$  and magnetic field  $\vec{B}(r)$  the force on a moving electric charge is  $\vec{F} = q \left[ \vec{E}(r) + \vec{v} \times \vec{B}(r) \right]$
- B. The force, due to magnetic field on a negative charge is opposite to that on a positive charge.
- C. The force due to magnetic field becomes zero if velocity and magnetic field are parallel or anti-parallel.
- D. For a static charge the magnetic force is maximum.

**Answer: D**



**Watch Video Solution**

3. A strong magnetic field is applied on a stationary electron, then
- A. moves in the direction of the field.
- B. remained stationary.
- C. moves perpendicular to the direction of the field.

D. moves opposite to the direction of the field.

**Answer: B**



**Watch Video Solution**

4. In an inertial frame of reference, the magnetic force on a moving charged particle is  $F$ . Its value in another inertial frame of reference will be

- A. remained same
- B. changed due to change in the amount of charge
- C. changed due to change in velocity of charged particle
- D. changed due to change in field direction

**Answer: C**



**Watch Video Solution**



5. The magnetic force  $\vec{F}$  on a current carrying conductor of length  $l$  in an external magnetic field  $\vec{B}$  is given by

A.  $\frac{I \times \vec{B}}{l}$

B.  $\frac{\vec{l} \times \vec{B}}{I}$

C.  $I(\vec{l} \times \vec{B})$

D.  $l^2 \vec{l} \times \vec{B}$

**Answer: C**



**Watch Video Solution**

6. A straight wire having mass of 1.2 kg and length of 1m carries a current of 5 A. If the wire is suspended in mid-air by a uniform horizontal magnetic field, then the magnitude of field is

A. 0.65T

B. 1.53T

C. 2.4T

D. 3.2T

**Answer: C**



**Watch Video Solution**

7. A conducting circular loop of radius  $r$  carries a constant current  $i$ . It is placed in a uniform magnetic field  $B$  such that  $B$  is perpendicular to the plane of loop. What is the magnetic force acting on the loop?

A.  $2\pi RIB$

B.  $2\pi Rl^2 B^3$

C.  $\pi R^2 IB$

D. zero

**Answer: D**



**Watch Video Solution**

8. A 2.5 m long straight wire having mass of 500 g is suspended in mid air by a uniform horizontal magnetic field B. If a current of 4 A is passing through the wire then the magnitude of the field is (Take  $g = 10 \text{ ms}^{-2}$ )

A. 0.5T

B. 0.6T

C. 0.25T

D. 0.8T

**Answer: A**



**Watch Video Solution**

9. A current of 10 ampere is flowing in a wire of length 1.5m. A force of 15N acts on it when it is placed in a uniform magnetic field of 2 tesla. The angle between the magnetic field and the direction of the current is

A.  $30^\circ$

B.  $45^\circ$

C.  $60^\circ$

D.  $90^\circ$

**Answer: A**



**Watch Video Solution**

**10.** The horizontal component of earth's magnetic field at a certain place is  $3.0 \times 10^{-5} T$  and having a direction from the geographic south to geographic north. The force per unit length on a very long straight conductor carrying, a 1.2 A in east to west direction is

A.  $3.0 \times 10^{-5} Nm^{-1}$

B.  $3.2 \times 10^{-5} Nm^{-1}$

C.  $3.6 \times 10^{-5} Nm^{-1}$

D.  $3.8 \times 10^{-5} Nm^{-1}$

**Answer: C**



**Watch Video Solution**

**11.** An 8 cm long wire carrying a current of 10 A is placed inside a solenoid perpendicular to its axis. If the magnetic field inside the solenoid is 0.3 T, then magnetic force on the wire is

A. 0.14N

B. 0.24N

C. 0.34N

D. 0.44N

**Answer: B**



**Watch Video Solution**

12. The magnetic force per unit length on a wire carrying a current of 10 A and making an angle of  $45^\circ$  with the direction of a uniform magnetic field of 0.20 T is

A.  $2\sqrt{2}Nm^{-1}$

B.  $\frac{2}{\sqrt{2}}Nm^{-1}$

C.  $\frac{\sqrt{2}}{2}Nm^{-1}$

D.  $4\sqrt{2}Nm^{-1}$

**Answer: B**



**Watch Video Solution**

13. A circular coil of 20 turns and radius 10cm is placed in a uniform magnetic field of 0.1T normal to the plane of the coil . If the current in the coil is 5.0A what is the average force on each electron in the coil due to the magnetic field ( The coil is made of copper wire of cross —

sectional area  $10^{-5}m^2$  and the free electron density in copper is given to be about  $10^{29}m^{-3}$ ).

A.  $2.5 \times 10^{-25}N$

B.  $5 \times 10^{-25}N$

C.  $4 \times 10^{-25}N$

D.  $3 \times 10^{-25}N$

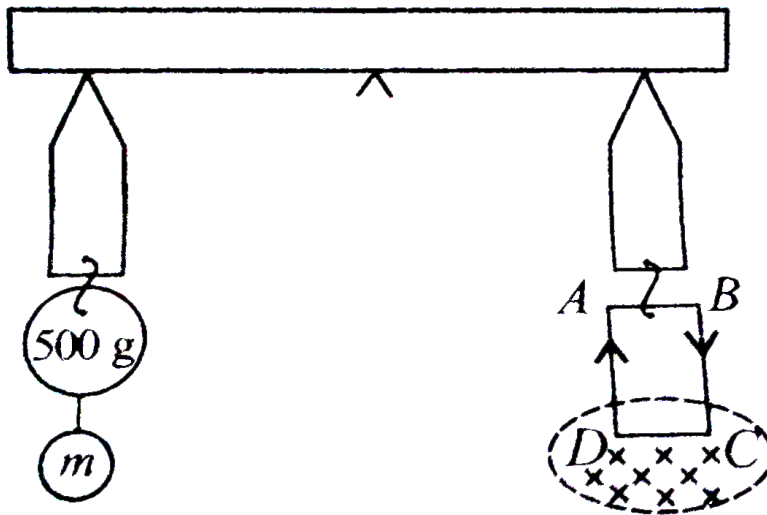
**Answer: B**



**Watch Video Solution**

**14.** A rectangular coil ABCD is hung from one side of a balance as shown in figure. A 500 g mass is added to the other arm to balance the weight of the coil. A current of 9.8 A is passed through the coil and a constant magnetic field of 0.4 T acting inward (in xz plane) is switched on such that only arm CD of length 1.5 cm lies in the field. The additional mass m must

be added to regain the balance is



A. 4g

B. 5g

C. 6g

D. 7g

**Answer: C**



**Watch Video Solution**



15. Which one of the following is correct statement about magnetic forces?

- A. Magnetic forces always obey Newton's third law
- B. Magnetic forces do not obey Newton's third law
- C. For very high current, magnetic forces obey Newton's third law
- D. Inside low magnetic field, magnetic forces obey Newton's third law

**Answer: B**



**Watch Video Solution**

## Motion In Magnetic Field

1. A charged particle is moving on circular path with velocity  $v$  in a uniform magnetic field  $B$ , if the velocity of the charged particle is doubled and strength of magnetic field is halved, then radius becomes

A. 8 times

B. 4 times

C. 2 times

D. 16 times

**Answer: B**



**Watch Video Solution**

2. An electron of energy 1800 eV describes a circular path in magnetic field of flux density 0.4 T. The radius of path is  $(q = 1.6 \times 10^{-19}C, m_e = 9.1 \times 10^{-31}kg)$

A.  $2.58 \times 10^{-4}m$

B.  $3.58 \times 10^{-4}m$

C.  $2.58 \times 10^{-3}m$

D.  $3.58 \times 10^{-4}m$

**Answer: B**



[Watch Video Solution](#)

3. Two  $\alpha$ -particles have the ratio of their velocities as 3:2 on entering the field. If they move in different circular paths, then the ratio of the radii of their paths is

A. 2 : 3

B. 3 : 2

C. 9 : 4

D. 4 : 9

**Answer: B**



[Watch Video Solution](#)

4. When a positively charged particle enters a uniform magnetic field with uniform velocity, its trajectory can be

*a)* a straight line *b)* a circle *c)* a helix

A. (i) only

B. (i) or (ii)

C. (i) or (iii)

D. any one of (i),(ii) and (iii)

**Answer: D**



**Watch Video Solution**

5. Two particles  $X$  and  $Y$  with equal charges, after being accelerated through the same potential difference, enter a region of uniform magnetic field and describe circular paths of radii  $R_1$  and  $R_2$  respectively.

The ratio of the mass of  $X$  to that of  $Y$  is

A.  $R_1 / R_2$

B.  $(R_1 / R_2)^2$

C.  $(R_2 / R_1)$

D.  $(R_2 / R_2)^2$

**Answer: B**



**Watch Video Solution**

6. An electron having momentum  $2.4 \times 10^{-23} \text{ kg m s}^{-1}$  enters a region of uniform magnetic field of 0.15 T. The field vector makes an angle of  $30^\circ$  with the initial velocity vector of the electron. The radius of the helical path of the electron in the field shall be

A. 2mm

B. 1mm

C.  $\frac{\sqrt{3}}{2} \text{ mm}$

D. 0.5mm

**Answer: D**



**Watch Video Solution**

## Motion In Combined Electric And Magnetic Fields

1. A charged particle with charge  $q$  enters a region of constant, uniform and mutually orthogonal fields  $\vec{E}$  and  $\vec{B}$  with a velocity  $\vec{v}$  perpendicular to both  $\vec{E}$  and  $\vec{B}$ , and comes out without any change in magnitude or direction of  $\vec{v}$ . Then

A.  $\vec{v} = \vec{B} \times \vec{E} / E^2$

B.  $\vec{v} = \vec{E} \times \vec{B} / B^2$

C.  $\vec{v} = \vec{B} \times \vec{E} / B^2$

D.  $\vec{v} = \vec{E} \times \vec{B} / E^2$

**Answer: B**



**Watch Video Solution**

2. A charged particle would continue to move with a constant velocity in a region wherein, which of the following conditions is not correct?

A.  $E = 0, B \neq 0$

B.  $E \neq 0, B \neq 0$

C.  $E \neq 0, B = 0$

D.  $E = 0, B = 0$

**Answer: C**



**Watch Video Solution**

3. The cyclotron frequency  $\nu_c$  is given by

A.  $\frac{qB}{2\pi m}$

B.  $\frac{mB}{2\pi q}$

C.  $\frac{2\pi m}{qB}$

D.  $\frac{2\pi B}{qm}$

**Answer: A**



**Watch Video Solution**

4. A charged particle is moving in a cyclotron, what effect on the radius of path of this charged particle will occur when the frequency of the radio frequency field is doubled?

- A. It will also be doubled.
- B. It will be halved.
- C. It will be increased by four times.
- D. It will remain unchanged.

**Answer: D**



**Watch Video Solution**



5. A cubical region of space is filled with some uniform electric and magnetic field. An electron enters the cube across one of its faces with velocity  $v$  and a positron enters via opposite face with velocity  $-v$ . At this instant, which one of the following is not correct?

- A. The electric forces on both the particles cause identical acceleration.
- B. The magnetic forces on both the particles cause equal acceleration.
- C. Both particles gain or lose energy at the same rate.
- D. The motion of the centre of mass is determined by B alone.

**Answer: A**



**Watch Video Solution**

6. A cyclotron is operated at an oscillator frequency of 12 MHz and has a dee radius  $R$  50 cm. What is the magnitude of the magnetic field needed for a proton to be accelerated in the cyclotron?

A. 0.78 T

B. 0.65 T

C. 0.39 T

D. 0.12 T

**Answer: A**



**Watch Video Solution**

7. If an electron is moving in a magnetic field of  $5.4 \times 10^{-4} T$  on a circular path of radius 32 cm having a frequency of 2.5 MHz, then its speed will be

A.  $8.56 \times 10^6 ms^{-1}$

B.  $5.024 \times 10^6 ms^{-1}$

C.  $8.56 \times 10^4 ms^{-1}$

D.  $5.024 \times 10^4 ms^{-1}$

**Answer: B**

8. A proton and an  $\alpha$ -particle enter in a uniform magnetic field perpendicularly with same speed. The will be ratio of time periods of both particle  $\left(\frac{T_p}{T_\alpha}\right)$  will be

A. 1 : 2

B. 1 : 3

C. 2 : 1

D. 3 : 1

**Answer: A**

9. A proton, a deuteron and  $\alpha$ -particle, whose kinetic energies are same, enter perpendicularly a uniform magnetic field. Compare the radii of their circular paths.

A.  $1:1:\sqrt{2}$

B.  $\sqrt{2}:1:1$

C.  $1:\sqrt{2}:1$

D.  $1:2:\sqrt{2}$

**Answer: C**



**Watch Video Solution**

**10.** An electron enters with a velocity  $\vec{v} = v_0 \hat{i}$  into a cubical region (faces parallel to coordinate planes) in which there are uniform electric and magnetic fields. The orbit of the electron is found to spiral down inside the cube in plane parallel to the x-y plane. Suggest a configuration of fields  $\vec{E}$  and  $\vec{B}$  that can lead to it.

A.  $\vec{E} = E_0 \hat{j}, \vec{B} = B_0 \hat{k}$

B.  $\vec{E} = E_0 \hat{i}, \vec{B} = B_0 \hat{k}$

C.  $\vec{E} = E_0 \hat{i}, \vec{B} = B_0 \hat{j}$

D.  $\vec{E} = E_0 \hat{j}$ ,  $\vec{B} = B_0 \hat{j}$

Answer: B



Watch Video Solution

11. Magnetic field applied on a cyclotron is  $0.7T$  and radius of its dees is  $1.8m$ . What will be the energy of the emergent protons in  $MeV$ ? Mass of proton  $= 1.67 \times 10^{-27}kg$ .



Watch Video Solution

12. Which of the following is not correct about cyclotron?

A. It is a machine to accelerate charged particles or ions to high energies.

B. Cyclotron uses both electric and magnetic fields in combination to increase the energy of charged particles.

C. The operation of the cyclotron is based on the fact that the time for one revolution of an ion is independent of its speed or radius of its orbit.

D. The charged particles and ions in cyclotron can move on any arbitrary path.

**Answer: D**



**Watch Video Solution**

**13.** The operating magnetic field for accelerating protons in a cyclotron oscillator having frequency of 12 MHz is

$(q = 1.6 \times 10^{-19} C, m_p = 1.67 \times 10^{-27} kg \text{ and } 1MeV = 1.6 \times 10^{-13} J)$

A. 0.69T

B. 0.79T

C. 0.59T

D. 0.49T

**Answer: B**



**Watch Video Solution**

**14.** In the question number 34, the kinetic energy (in MeV) of the proton beam produced by the accelerator is (radius of dees =60 cm)

A. 5

B. 6.5

C. 10.6

D. 12.6

**Answer: C**



**View Text Solution**

**15.** An electron is moving in a cyclotron at a speed of  $3.2 \times 10^7 \text{ ms}^{-1}$  in a magnetic field of  $5 \times 10^{-4} \text{ T}$  perpendicular to it. What is the frequency of

this electron? ( $q = 1.6 \times 10^{-19}C$ ,  $m_e = 9.1 \times 10^{-31}kg$ )

A.  $1.4 \times 10^5 Hz$

B.  $1.4 \times 10^7 Hz$

C.  $1.4 \times 10^6 Hz$

D.  $1.4 \times 10^9 Hz$

**Answer: B**



**Watch Video Solution**

**16.** A proton is accelerating on a cyclotron having oscillating frequency of 11 MHz in external magnetic field of 1 T. If the radius of its dees is 55 cm, then its kinetic energy (in MeV) is is ( $m_p = 1.67 \times 10^{-27}kg$ ,  $e = 1.6 \times 10^{-19}C$ )`

A. 13.36

B. 12.52

C. 14.89

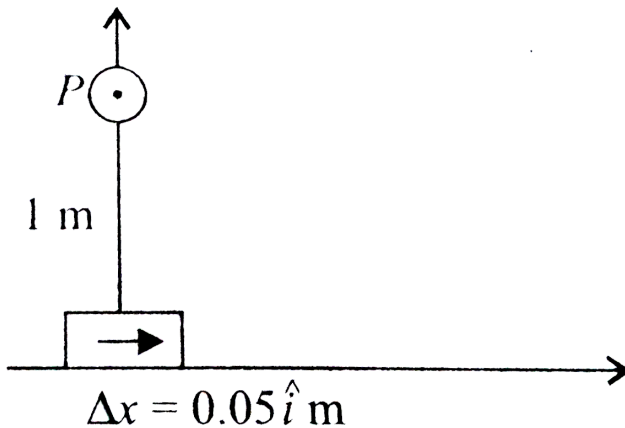


Answer: D


[Watch Video Solution](#)

### Magnetic Field Due To A Current Element Biot Savart Law

1. An element of  $0.05\hat{i}\text{ m}$  is placed at the origin as shown in figure which carries a large current of 10 A. The magnetic field at a distance of 1 m in perpendicular direction is



A.  $4.5 \times 10^{-8}\text{ T}$

B.  $5.5 \times 10^{-8} T$

C.  $5.0 \times 10^{-8} T$

D.  $7.5 \times 10^{-8} T$

**Answer: C**



**Watch Video Solution**

2. If an electron is moving with velocity  $v$  produces a magnetic field  $\vec{B}$ , then

A. the direction of field  $\vec{B}$  will be same as the direction of velocity  $\vec{v}$ .

B. the direction of field  $\vec{B}$  will be opposite to the direction of velocity  $\vec{v}$ .

C. the direction of field  $\vec{B}$  will be perpendicular to the direction of velocity  $\vec{v}$ .

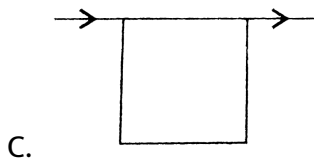
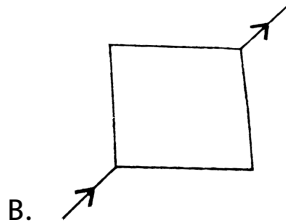
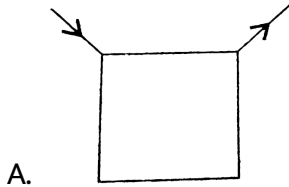
D. the direction of field  $\vec{B}$  does not depend upon the direction of velocity  $\vec{v}$ .

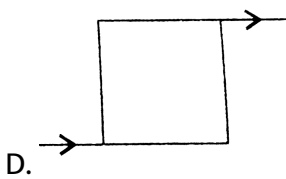
**Answer: C**



**Watch Video Solution**

3. Current flows through uniform square frames as shown. In which case is the magnetic field at the centre of the frame not zero ?





**Answer: C**



**Watch Video Solution**

4. Five long wires A, B, C, D and E, each carrying current  $I$  are arranged to form edges of a pentagonal prism as shown in figure. Each carries current out of the plane of paper.

(a) What will be magnetic induction at a point on the axis O? Axis is at a distance  $R$  from each wire.

(b) What will be the field if current in one of the wires (say A) is switched off?

(c) What if current in one of the wire (say) A is reversed?

A. equal to zero

B. less than zero

C. more than zero

D. infinite

**Answer: A**



**View Text Solution**

### Magnetic Field On The Axis Of A Circular Current Loop

1. A circular loop of radius 3 cm is having a current of 12.5 A. The magnitude of magnetic field at a distance of 4 cm on its axis is

A.  $5.65 \times 10^{-5} T$

B.  $5.27 \times 10^{-5} T$

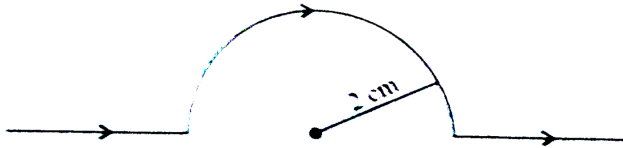
C.  $6.54 \times 10^{-5} T$

D.  $9.20 \times 10^{-5} T$

**Answer: A**

[Watch Video Solution](#)

2. A straight wire carrying a current of 13 A is bent into a semi-circular arc of radius 2 cm as shown in figure. The magnetic field is  $1.5 \times 10^{-4} T$  at the centre of arc, then the magnetic field due to straight segment is



A.  $1.5 \times 10^{-4} T$

B.  $2.5 \times 10^{-4} T$

C. zero

D.  $3 \times 10^{-4} T$

**Answer: C**

[Watch Video Solution](#)

3. A circular coil of wire consisting of 100 turns each of radius 9 cm carries a current of 0.4 A. The magnitude of the magnetic field at the centre of coil is  $[\mu_0 = 1256 \times 10^{-7} \text{ SI unit}]$

A.  $2.4 \times 10^{-4} T$

B.  $3.5 \times 10^{-4} T$

C.  $2.79 \times 10^{-4} T$

D.  $3 \times 10^{-4} T$

**Answer: C**



**Watch Video Solution**

4. The magnitude of the magnetic field at the centre of the tightly wound 150 turn coil of radius 12 cm carrying a current of 2 A is

A. 18G

B. 19.7G

C. 15.7G

D. 17.7G

**Answer: C**



**Watch Video Solution**

5. A tightly wound 90 turn coil of radius 15 cm has a magnetic field of  $4 \times 10^{-4} T$  at its centre. The current flowing through it is

A. 1.06A

B. 2.44A

C. 3.44A

D. 4.44A

**Answer: A**



**Watch Video Solution**



6. A 4 A current carrying loop consists of three identical quarter circles of radius 5 cm lying in the positive quadrants of the x-y, y-z and z-x planes with their centres at the origin joined together, value of B at the origin is

A.  $\frac{\mu_0}{10} (\hat{i} + \hat{j} - \hat{k}) T$

B.  $\frac{\mu_0}{10} (-\hat{i} + \hat{j} + \hat{k}) T$

C.  $\frac{\mu_0}{5} (\hat{i} + \hat{j} + \hat{k}) T$

D.  $10\mu_0 (\hat{i} + \hat{j} + \hat{k}) T$

**Answer: D**



**Watch Video Solution**

7. The electric current in a circular coil of two turns produced a magnetic induction of 0.2 T at its centre. The coil is unwound and then rewound into a circular coil of four turns. If same current flows in the coil, the magnetic induction at the centre of the coil now is

A. 0.2T

B. 0.4T

C. 0.6T

D. 0.8T

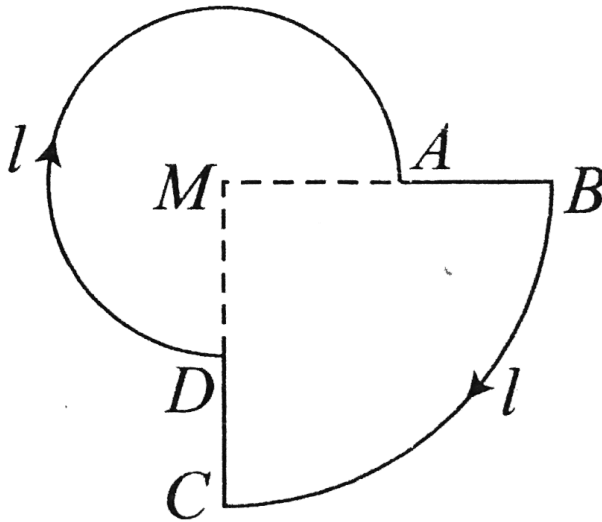
**Answer: D**



**Watch Video Solution**

8. A current  $I$  is flowing through the loop. The direction of the current and the shape of the loop are as shown in the figure. The magnetic field at the centre of the loop is  $\frac{\mu_0 I}{R}$  times

$$(MA = R, MB = 2R, \angle DMA = 90^\circ)$$



- A.  $\frac{5}{16}$ , out of the plane of the paper.
- B.  $\frac{5}{16}$ , into the plane of the paper.
- C.  $\frac{7}{16}$ , into the plane of the paper.
- D.  $\frac{7}{16}$ , out the plane of the paper.

**Answer: D**



**Watch Video Solution**

1. A solenoid of length 0.6 m has a radius of 2 cm and is made up of 600 turns. If it carries a current of 4 A, then the magnitude of the magnetic field inside the solenoid is

A.  $6.024 \times 10^{-3} T$

B.  $8.024 \times 10^{-3} T$

C.  $5.024 \times 10^{-3} T$

D.  $7.024 \times 10^{-3} T$

**Answer: C**



**Watch Video Solution**

2. A solenoid of length 50 cm, having 100 turns carries a current of 2.5 A. Find the magnetic field, (a) in the interior of the solenoid, (b) at one end

of the solenoid.

Given  $\mu_0 = 4\pi \times 10^{-7} \text{WbA}^{-1}\text{m}^{-1}$ .

A.  $3.14 \times 10^{-4} \text{T}$

B.  $6.28 \times 10^{-4} \text{T}$

C.  $1.57 \times 10^{-4} \text{T}$

D.  $9.42 \times 10^{-4} \text{T}$

**Answer: A**



**Watch Video Solution**

3. A 90 cm long solenoid has six layers of windings of 450 turns each. If the diameter of solenoid is 2.2 cm and current carried is 6 A, then the magnitude of magnetic field inside the solenoid, near its centre is

A.  $50\pi G$

B.  $60\pi G$

C.  $72\pi G$

D.  $80\pi G$

**Answer: C**



**Watch Video Solution**

**4.** Which of the following statement is correct?

- A. The magnetic field in the open space inside the toroid is constant.
- B. The magnetic field in the open space exterior to the toroid is constant.
- C. The magnetic field inside the core of toroid is constant.
- D. The magnetic field inside the core of toroid is zero.

**Answer: C**



**Watch Video Solution**

5. The inner and outer radius of a toroid core are 28 cm and 29 cm respectively and around the core 3700 turns of a wire are wound. If the current in the wire is 10 A, then the magnetic field inside the core of the toroid is

A.  $2.60 \times 10^{-2} T$

B.  $2.60 \times 10^{-3} T$

C.  $4.52 \times 10^{-2} T$

D.  $4.52 \times 10^{-3} T$

**Answer: A**



**Watch Video Solution**

## Force Between The Parallel Currents The Ampere

1. The nature of parallel and anti-parallel currents are

- A. parallel currents repel and antiparallel currents attract.
- B. parallel currents attract and antiparallel currents repel.
- C. both currents attract.
- D. both currents repel.

**Answer: B**



**Watch Video Solution**

2. Two parallel wires 2 m apart carry currents of 2 A and 5 A respectively in same direction, the force per unit length acting between these two wires is

- A.  $2 \times 10^{-6} Nm^{-1}$
- B.  $3 \times 10^{-6} Nm^{-1}$
- C.  $1 \times 10^{-6} Nm^{-1}$
- D.  $4 \times 10^{-6} Nm^{-1}$



**Answer: C**



**Watch Video Solution**

3. Two long and parallel straight wires A and B are carrying currents of 4A and 7A in the same directions are separated by a distance of 5cm. The force acting on a 8cm section of wire A is

A.  $3 \times 10^{-6} N$

B.  $6 \times 10^{-6} N$

C.  $9 \times 10^{-6} N$

D.  $12 \times 10^{-6} N$

**Answer: C**



**Watch Video Solution**

4. A conductor of length 2 m carrying current 2 A is held parallel to an infinitely long conductor carrying current of 12 A at a distance of 100 mm, the force on small conductor is

A.  $8.6 \times 10^{-5} N$

B.  $6.6 \times 10^{-5} N$

C.  $7.6 \times 10^{-5} N$

D.  $9.6 \times 10^{-5} N$

**Answer: D**



**Watch Video Solution**

5. Two straight wires A and B of lengths 10 m and 12 m carrying currents of 4.0 A and 6.0 A respectively in opposite direction, lie parallel to each other at a distance of 3.0 cm. The force on a 15 cm section of the wire B near its centre is

A.  $2.4 \times 10^{-5} N$ , attractive

B.  $2.4 \times 10^{-5} N$ , repulsive

C.  $1.2 \times 10^{-5} N$ , attractive

D.  $1.2 \times 10^{-5} N$ , attractive

**Answer: B**



**Watch Video Solution**

6. A long straight wire carrying current of 30 A rests on a table. Another wire AB of length 1 m, mass 3 g carries the same current but in the opposite direction, the wire AB is free to slide up and down. The height upto which AB will rise is

A. 0.6 cm

B. 0.7 cm

C. 0.4 cm

D. 0.5 cm

**Answer: A**



**Watch Video Solution**

## Torque On Current Loop Magnetic Dipole

1. The magnetic moment of a current  $I$  carrying circular coil of radius  $r$  and number of turns  $N$  varies as

A.  $\frac{1}{r^2}$

B.  $\frac{1}{r}$

C.  $r$

D.  $r^2$

**Answer: D**



**Watch Video Solution**

2. A 200 turn closely wound circular coil of radius 15 cm carries a current of 4 A. The magnetic moment of this coil is

A.  $36.5Am^2$

B.  $56.5Am^2$

C.  $66.5Am^2$

D.  $108Am^2$

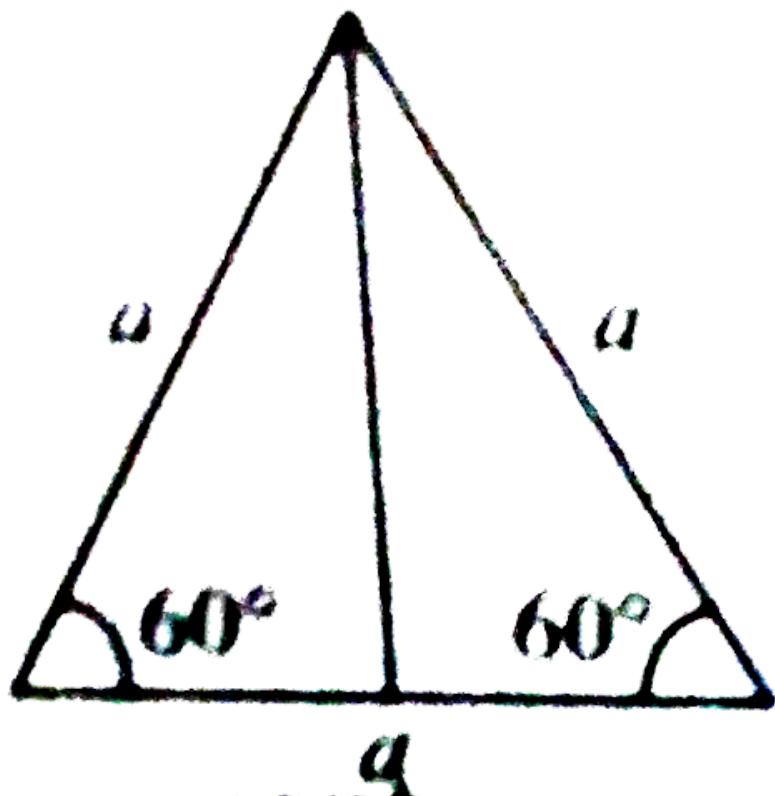
**Answer: B**



**Watch Video Solution**

3. A uniform conducting wire of length  $10a$  and resistance  $R$  is wound up into four turn as a current carrying coil in the shape of equilateral triangle of side  $a$ . If current  $I$  is flowing through the coil then

the magnetic moment of the coil is



A.  $\frac{\sqrt{3}}{2}a^2I$

B.  $\frac{a^2I}{\sqrt{3}}$

C.  $\sqrt{3}a^2I$

D.  $\frac{2a^2I}{\sqrt{3}}$

Answer: C



Watch Video Solution

4. The magnetic moment associated with a circular coil of 35 turns and radius 25 cm, if it carries a current of 11 A is

A.  $72.2Am^2$

B.  $70.5Am^2$

C.  $74.56Am^2$

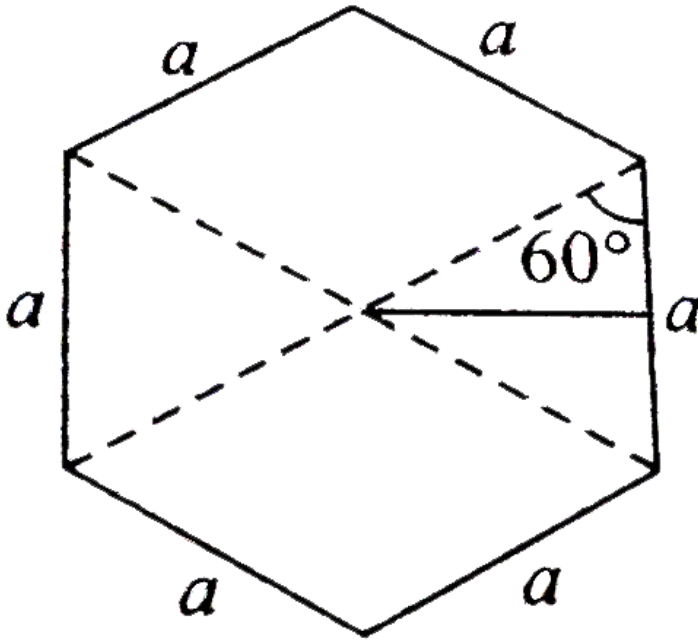
D.  $75.56Am^2$

**Answer: D**

[Watch Video Solution](#)

5. A uniform conducting wire of length  $18a$  and resistance  $R$  is wound up as current carrying coil in the shape of a regular a hexagon of sides  $a$ . If

the coil is connected to a voltage source  $V_0$ , then the magnetic moment



of coil is

- A.  $6\sqrt{3} \frac{V_0}{R} a^2 Am^2$
- B.  $\frac{9\sqrt{3}}{2} \frac{V_0 a^2}{R} Am^2$
- C.  $\frac{7\sqrt{3}}{2} \frac{V_0 a^2}{R} Am^2$
- D.  $\frac{11\sqrt{3}}{2} \frac{V_0 a^2}{R} Am^2$

**Answer: B**



**Watch Video Solution**



6. Magnetic field at the centre of a circular loop of area  $A$  carrying current  $I$  is  $B$ . What is the magnetic moment of this loop?

- A.  $\frac{(BA)^2}{\mu_0 \pi}$
- B.  $\frac{BA\sqrt{A}}{\mu_0}$
- C.  $\frac{BA\sqrt{A}}{\mu_0 \pi}$
- D.  $\frac{2BA\sqrt{A}}{\mu_0 \sqrt{\pi}}$

**Answer: D**



**Watch Video Solution**

7. A short bar magnet has a magnetic moment of  $0.65 T J^{-1}$ , then the magnitude and direction of the magnetic field produced by the magnet at a distance 8 cm from the centre of magnet on the axis is

- A.  $2.5 \times 10^{-4} T$ , along NS direction

B.  $2.5 \times 10^{-4}T$ , along SN direction

C.  $4.5 \times 10^{-4}T$ , along NS direction

D.  $4.5 \times 10^{-4}T$ , along NS direction

**Answer: B**



**Watch Video Solution**

8. A circular coil of radius 10 cm having 100 turns carries a current of 3.2 A.

The magnetic field at the center of the coil is

A.  $2.01 \times 10^{-3}T$

B.  $5.64 \times 10^{-3}T$

C.  $2.64 \times 10^{-3}T$

D.  $5.64 \times 10^{-3}T$

**Answer: A**



**Watch Video Solution**

9. In the question number 73, for the coil given the magnetic moment is

A.  $12.95 \text{ Am}^2$

B.  $25.79 \text{ Am}^2$

C.  $10.05 \text{ Am}^2$

D.  $24.79 \text{ Am}^2$

**Answer: C**



**Watch Video Solution**

10. In the question number 73, the given coil is placed in a vertical plane and is free to rotate about a horizontal axis which coincides with its diameter. A uniform magnetic field of 5T in the horizontal direction exists such that initially the axis of the coil is in direction of the field. The coil rotates through an angle of  $60^\circ$  under the influence of magnetic field. The magnitude of torque on the coil in the final position is

A. 25 N m

B.  $25\sqrt{3}Nm$

C. 40 N m

D.  $40\sqrt{3}Nm$

**Answer: B**



**View Text Solution**

**11.** A current carrying loop is placed in a uniform magnetic field. The torque acting on it does not depend upon

A. area of loop

B. value of current

C. magnetic field

D. None of these

**Answer: D**

12. A circular coil of 70 turns and radius 5 cm carrying a current of 8 A is suspended vertically in a uniform horizontal magnetic field of magnitude 1.5 T. The field lines make an angle of  $30^\circ$  with the normal of the coil then the magnitude of the counter torque that must be applied to prevent the coil from turning is

A. 33 Nm

B. 3.3 Nm

C.  $3.3 \times 10^{-2} Nm$

D.  $3.3 \times 10^{-4} Nm$

**Answer: B**

13. A circular coil of 25 turns and radius 12 cm is placed in a uniform magnetic field of 0.5 T normal to the plane of the coil. If the current in the coil is 6 A then total torque acting on the coil is

- A. zero
- B. 3.4 Nm
- C. 3.8 Nm
- D. 4.4 Nm

**Answer: A**



**Watch Video Solution**

14. The final torque on a coil having magnetic moment 25 A m<sup>2</sup> in a 5 T uniform external magnetic field, if the coil rotates through an angle of 60° under the influence of the magnetic field is

- A. 216.5Nm

B. 108.25Nm

C. 102.5Nm

D. 258.1Nm

**Answer: B**



**Watch Video Solution**

**15.** A square coil of side  $10\text{cm}$  consists of 20 turns and carries a current of 12A. The coil is suspended vertically and normal to the plane of the coil makes an angle of  $30^\circ$  with the direction of a uniform horizontal magnetic field of magnitude  $0.80\text{T}$ . What is the magnitude of torque experienced by the coil?

A. 1.6 N m

B. 1.2 N m

C. 1.4 N m

D. 1.8 N m

**Answer: A**



**Watch Video Solution**

**16.** A coil having magnetic moment  $15 \text{ A m}^2$  placed in a uniform magnetic field of  $4 \text{ T}$  in the horizontal direction exists such that initially the axis of coil is in the direction of the field. If the coil is rotated by  $45^\circ$  and the moment of inertia of the coil is  $0.5 \text{ kg m}^2$  then the angular speed acquired by the coil is

A.  $20 \text{ rad s}^{-1}$

B.  $10 \text{ rad s}^{-1}$

C.  $8.34 \text{ rad s}^{-1}$

D.  $4.5 \text{ rad s}^{-1}$

**Answer: C**



**Watch Video Solution**



17. The gyromagnetic ratio of an electron in sodium atom is

- A. depending upon the atomic number of the atom
- B. depending upon the shell number of the atom
- C. independent of that orbit it is in
- D. having positive value

**Answer: C**



**Watch Video Solution**

18. Gyromagnetic ratio is the ratio of magnetic moment ( $\mu_l$ ) to the orbital angular momentum ( $l$ ). Its numerical value for an electron is given by

A.  $8.8 \times 10^{-12} C \text{ kg}^{-1}$

B.  $8.8 \times 10^{10} C \text{ kg}^{-1}$

C.  $1.6 \times 10^{-19} C \text{ kg}^{-1}$

D.  $6.67 \times 10^{11} C \text{ kg}^{-1}$

**Answer: B**



**Watch Video Solution**

**19.** What is the correct value of Bohr magneton?

A.  $8.89 \times 10^{-24} Am^2$

B.  $9.27 \times 10^{-24} Am^2$

C.  $5.56 \times 10^{-24} Am^2$

D.  $9.27 \times 10^{-28} Am^2$

**Answer: B**



**Watch Video Solution**

1. In a moving coil galvanometer the deflection ( $\phi$ ) on the scale by a pointer attached to the spring is

A.  $\left(\frac{NA}{kB}\right)I$

B.  $\left(\frac{N}{kAB}\right)I$

C.  $\left(\frac{NAB}{k}\right)I$

D.  $\left(\frac{NAB}{kI}\right)$

**Answer: C**



**Watch Video Solution**

2. Two moving coil metres  $M_1$  and  $M_2$  have the following particular

$$R_1 = 10\Omega, N_1 = 30, A_1 = 3.6 \times 10^{-3}m^2, B_1 = 0.25T,$$

$$R_2 = 14\Omega, N_2 = 42, A_2 = 1.8 \times 10^{-3}m^2, B_2 = 0.50T$$

The spring constants are identical for the two metres. What is the ratio of current sensitivity and voltage sensitivity of  $M_2$  to  $M_1$ ?

A. 1.4, 1

B. 1.4, 0

C. 2.8, 2

D. 2.8, 0

**Answer: A**



**Watch Video Solution**

3. If the current sensitivity of a galvanometer is doubled, then its voltage sensitivity will be

A. doubled

B. halved

C. unchanged

D. four times

**Answer: C**



**Watch Video Solution**

4. A galvanometer can be converted into an ammeter by connecting

- A. introducing a shunt resistance of large value in series.
- B. introducing a shunt resistance of small value in parallel.
- C. introducing a resistance of small value in series.
- D. introducing a resistance of large value in parallel.

**Answer: B**



**Watch Video Solution**

5. A galvanometer of resistance  $70\Omega$ , is converted to an ammeter by a shunt resistance  $r_3 = 0.03\Omega$ . The value of its resistance will become

- A.  $0.025\Omega$
- B.  $0.022\Omega$
- C.  $0.035\Omega$

D.  $0.030\Omega$

**Answer: D**



**Watch Video Solution**

6. If the galvanometer current is 10 mA, resistance of the galvanometer is  $40\Omega$  and shunt of  $2\Omega$  is connected to the galvanometer, the maximum current which can be measured by this ammeter is

A. 0.21A

B. 2.1A

C. 210A

D. 21A

**Answer: A**



**Watch Video Solution**

7. A galvanometer of resistance  $40\Omega$  gives a deflection of 5 divisions per mA. There are 50 divisions on the scale. The maximum current that can pass through it when a shunt resistance of  $2\Omega$  is connected is

- A. 210mA
- B. 155 Ma
- C. 420mA
- D. 75 Ma

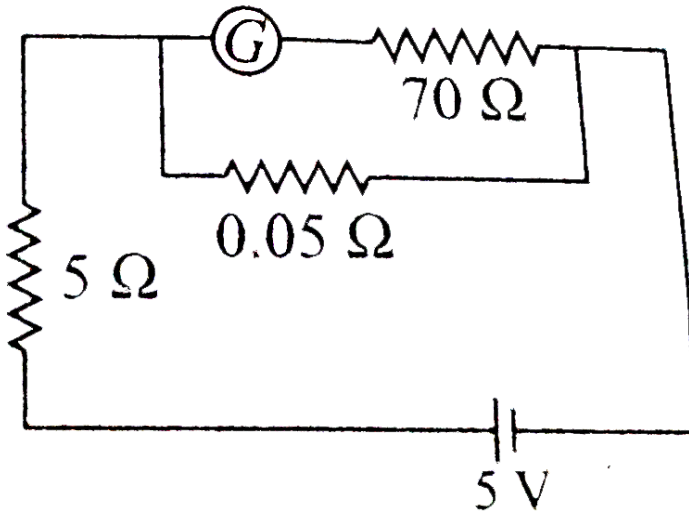
**Answer: A**



**Watch Video Solution**

8. In the given circuit, a galvanometer with a resistance of  $70\Omega$  is converted to an ammeter  $0.05\Omega$  by a shunt resistance of 0.052, total

current measured by this device



A. 0.88A

B. 0.77A

C. 0.55A

D. 0.99A

**Answer: D**



**Watch Video Solution**



9. A galvanometer having a resistance of  $50\Omega$ , gives a full scale deflection for a current of 0.05 A. The length (in metres) of a resistance wire of area of cross section  $3 \times 10^{-2} \text{ cm}^2$  that can be used to convert the galvanometer into an ammeter which can read a maximum of 5 A current is (Specific resistance of the wire  $\rho = 5 \times 10^{-7} \Omega \text{ m}$ )

A. 9

B. 6

C. 3

D. 1.5

**Answer: C**



**Watch Video Solution**

10. The conversion of a moving coil galvanometer into a voltmeter is done by

- A. introducing a resistance of large value in series
- B. introducing a resistance of small value in parallel
- C. introducing a resistance of large value in parallel
- D. introducing a resistance of small value in series

**Answer: A**



**Watch Video Solution**

**11.** The resistance of a galvanometer is  $10\Omega$ . It gives full-scale deflections when  $1mA$  current is passed. The resistance connected in series for converting it into a voltmeter of  $2.5V$  will be

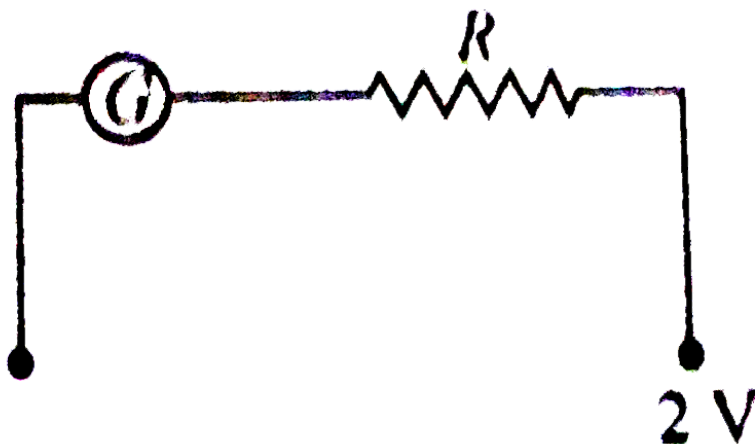
- A.  $24.9\Omega$
- B.  $249\Omega$
- C.  $2490\Omega$
- D.  $24900\Omega$

Answer: C



Watch Video Solution

12. A voltmeter which can measure 2 V is constructed by using a galvanometer of resistance  $12\Omega$  and that produces maximum deflection for the current of  $2\text{mA}$ . Then the resistance  $R$  is



A.  $888\Omega$

B.  $988\Omega$

C.  $898\Omega$

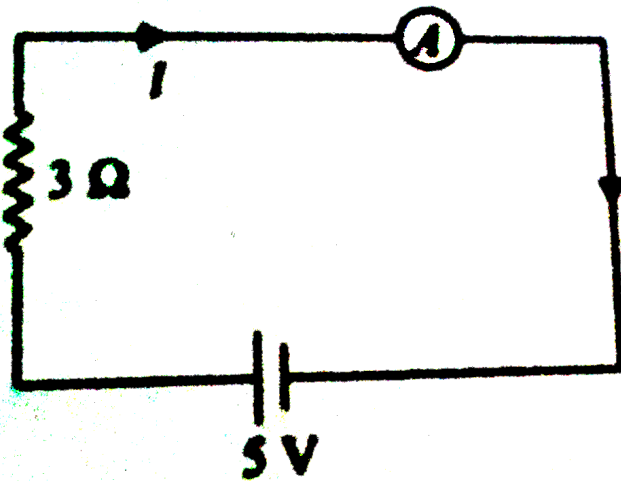
D.  $999\Omega$

Answer: B



Watch Video Solution

13. The value of current in the given circuit if the ammeter is a galvanometer with a resistance  $R_G = 50\Omega$  is



A. 0.048 A

B. 0.023 A

C. 0.061 A

D. 0.094 A

**Answer: D**



**Watch Video Solution**

**14.** A galvanometer coil has a resistance of  $15\Omega$  and the metre shows full scale deflection for a current of 4 mA. To convert the meter into a voltmeter of range 0 to 18 V, the required resistance is

- A.  $5885\Omega$  in series
- B.  $4485\Omega$  in series
- C.  $5885\Omega$  in series
- D.  $4485\Omega$  in series

**Answer: B**



**Watch Video Solution**

15. A galvanometer of resistance  $50\Omega$  is connected to a battery of  $3V$  along with resistance of  $2950\Omega$  in series. A full scale deflection of 30 divisions is obtained in the galvanometer. In order to reduce this deflection to 20 division the above series resistance should be

A.  $6050\Omega$

B.  $4450\Omega$

C.  $5050\Omega$

D.  $5550\Omega$

**Answer: B**



**Watch Video Solution**

16. The range of voltmeter of resistance  $300\Omega$  is  $5\text{ V}$ . The resistance to be connected to convert it into an ammeter of range  $5\text{ A}$  is

A.  $1\Omega$  in series

B.  $1\Omega$  in parallel

C.  $0.1\Omega$  in series

D.  $0.1\Omega$  in parallel

**Answer: B**



**Watch Video Solution**

### Higher Order Thinking Skills

1. A steady current  $I$  goes through a wire loop  $PQR$  having shape of a right angle triangle with  $PQ = 3x$ ,  $PR = 4x$  and  $QR = 5x$ . If the magnitude of the magnetic field at  $P$  due to this loop is  $k\left(\frac{\mu_0 I}{48\pi x}\right)$ , find the value of  $K$ .

A. 1

B. 5

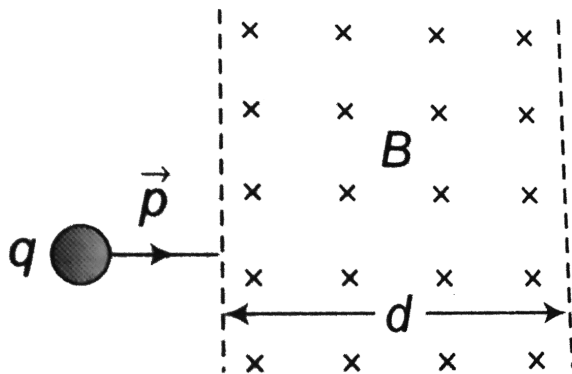
C. 10

Answer: D



Watch Video Solution

2. A particle with charge  $q$ , moving with a momentum  $p$ , enters a uniform magnetic field normally. The magnetic field has magnitude  $B$  and is confined to a region of width  $d$ , where  $d < \frac{p}{Bq}$ . If the particle is deflected by an angle  $\theta$  in crossing the field then



A.  $\sin \theta = \frac{BQd}{p}$

B.  $\sin \theta = \frac{P}{BQd}$



$$\text{C. } \sin \theta = \frac{Bp}{Qd}$$

$$\text{D. } \sin \theta = \frac{pd}{BQ}$$

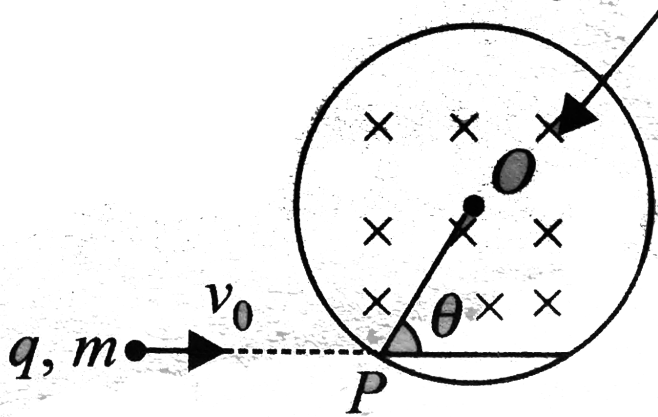
**Answer: A**



**Watch Video Solution**

3. A particle of charge  $q$  and mass  $m$  is projected with a velocity  $v_0$  toward a circular region having uniform magnetic field  $B$  perpendicular and into the plane of paper from point  $P$  as shown in Fig. 1.136.  $R$  is the radius and  $O$  is the center of the circular region. If the line  $OP$  makes an angle  $\theta$  with the direction of  $v_0$  then the value of  $v_0$  so that particle passes through  $O$

is



- A.  $\frac{qBR}{m \sin \theta}$
- B.  $\frac{qBR}{2m \sin \theta}$
- C.  $\frac{2qBR}{m \sin \theta}$
- D.  $\frac{3qBR}{2m \sin \theta}$

**Answer: B**



**Watch Video Solution**

4. A current  $I$  flows in a rectangularly shaped wire whose centre lies at  $(x_0, 0, 0)$  and whose vertices are located at the points  $A(x_0 + d, -a, -b)$ ,  $B(x_0 - d, a, -b)$ ,  $C(x_0 - d, a, +b)$  and  $D(x_0 + d, +b)$  respectively. Assume that  $a, b, d \ll x_0$ . Find the magnitude of magnetic dipole moment vector of the rectangular wire frame in  $J/T$ . (Given,  $b=10$  m,  $I=0.01$  A,  $d=4$  m,  $a=3$  m).

A.  $2JT^{-1}$

B.  $4JT^{-1}$

C.  $3JT^{-1}$

D.  $9JT^{-1}$

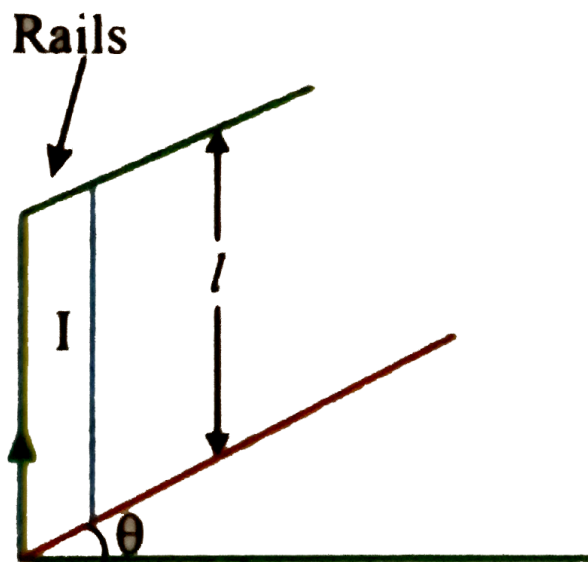
**Answer: A**



**Watch Video Solution**

5. A conducting wire of length  $l$  and mass  $m$  is placed on two inclined rails as shown in figure. A current  $I$  is flowig in the wire in the direction

shown When no magnetic field is present in the region, the wire is just on the verge of sliding. When a vertically upward magnetic field is switched on, the wire starts moving up the incline. The distance travelled by the wire as a function of time  $t$  will be



- A.  $\frac{1}{2} \left[ \frac{IBl}{m} - 2g \right] t^2$
- B.  $\frac{1}{2} \left[ \frac{IBl}{m} \times \frac{1}{\cos \theta} - 2g \sin \theta \right] t^2$
- C.  $\frac{1}{2} \left[ \frac{IBl}{m} - 2g \sin \theta \right] t^2$
- D.  $\frac{1}{2} \left[ \frac{IBl}{m} \frac{\cos 2\theta}{\cos \theta} - 2g \sin \theta \right] t^2$

**Answer: D**



[View Text Solution](#)

6. A current  $I=10\text{A}$  flows in a ring of radius  $r_0 = 15\text{cm}$  made of a very thin wire. The tensile strength of the wire is equal to  $T=1.5\text{N}$ . The ring is placed in a magnetic field, which is perpendicular to the plane of the ring so that the forces tend to break the ring. Find  $B$  ( in T) at which the ring is broken.

A.  $0.5\text{ T}$

B.  $1\text{ T}$

C.  $2\text{ T}$

D.  $2.5\text{ T}$

**Answer: B**



[Watch Video Solution](#)

7. Inside a long straight uniform wire of round cross-section, there is a long round cylindrical cavity whose axis is parallel to the axis of the wire and displaced from the latter by a distance  $l$ . A direct current of density  $j$  flows along the wire. Find the magnetic induction inside the cavity. Consider, in particular, the case  $l = 0$ .



A. 0

B.  $\frac{1}{2} \mu_0 \vec{J} \times \vec{d}$

C.  $\mu_0 \vec{J} \times \vec{d}$

D.  $\frac{3}{2} \mu_0 \vec{J} \times \vec{d}$

**Answer: B**



**Watch Video Solution**

8. A galvanometer has a current sensitivity of 1 mA per division. A variable shunt is connected across the galvanometer and the combination is put

in series with a resistance of  $500\Omega$  and cell of internal resistance  $1\Omega$ . It gives a deflection of 5 division for shunt of 5 ohm and 20 division for shunt of 25 ohm. The emf of cell is

A. 47.1 V

B. 57.1 V

C. 67.1 V

D. 77.1 V

**Answer: A**



**Watch Video Solution**

### Ncert Exemplar

1. Two charged particles traverse identical helical paths in a completely opposite sense in a uniform magnetic field  $\vec{B} = B_0 \hat{K}$

A. They have equal  $z$  – components of momenta.

- B. They must have equal charges.
- C. They necessarily represent a particle-antiparticle pair.
- D. The charge to mass ratio satisfy:

$$\left(\frac{e}{m}\right)_1 + \left(\frac{e}{m}\right)_2 = 0.$$

**Answer: D**

 **Watch Video Solution**

2. Biot-Savart law indicates that the moving electrons (velocity  $\vec{v}$ ) produce a magnetic field  $\vec{B}$  such that

A.  $\vec{B} \perp \vec{v}$

B.  $\vec{B} \parallel \vec{v}$

C. it obeys inverse cube law.

D. it is along the line joining the electron and point of observation.

**Answer: A**



3. A current carrying circular loop of radius  $R$  is placed in the  $x$ - $y$  plane with centre at the origin. Half of the loop with  $x > 0$  is now bent so that it now lies in the  $y$ - $z$  plane.

- A. The magnitude of magnetic moment now diminishes.
- B. The magnetic moment does not change.
- C. The magnitude of  $\vec{B}$  at  $(0, 0, z)$ ,  $z > R$  increases.
- D. The magnitude of  $\vec{B}$  at  $(0, 0, z)$ ,  $z > R$  is unchanged.

**Answer: A**

4. An electron is projected with uniform velocity along the axis of a current carrying long solenoid. Which of the following is true?

- A. The electron will be accelerated along the axis.
- B. The electron path will be circular about the axis.
- C. The electron will experience a force at  $45^\circ$  to the axis and hence execute a helical path.
- D. The electron will continue to move with uniform velocity along the axis of the solenoid.

**Answer: D**



**Watch Video Solution**

**5. In a cyclotron, a charged particle**

- A. undergoes acceleration all the time.
- B. speeds up between the dees because of the magnetic field.
- C. speeds up in a dee.
- D. slows down within a dee and speeds up between dees.

**Answer: A**



**Watch Video Solution**

6. A circular current loop of magnetic moment  $M$  is in an arbitrary orientation in an external magnetic field  $\vec{B}$ . The work done to rotate the loop by  $30^\circ$  about an axis perpendicular to its plane is :

A.  $MB$

B.  $\sqrt{3}\frac{MB}{2}$

C.  $\frac{MB}{2}$

D. zero.

**Answer: D**



**Watch Video Solution**

1. Assertion : Electron revolves around a positively charged nucleus like a planet revolves around the sun.

Reason : The force acting in both the cases is of same kind.

A. If both assertion and reason are true and reason is the correct explanation of assertion.

B. If both assertion and reason are true but reason is the correct explanation of assertion.

C. If assertion is true but reason is false

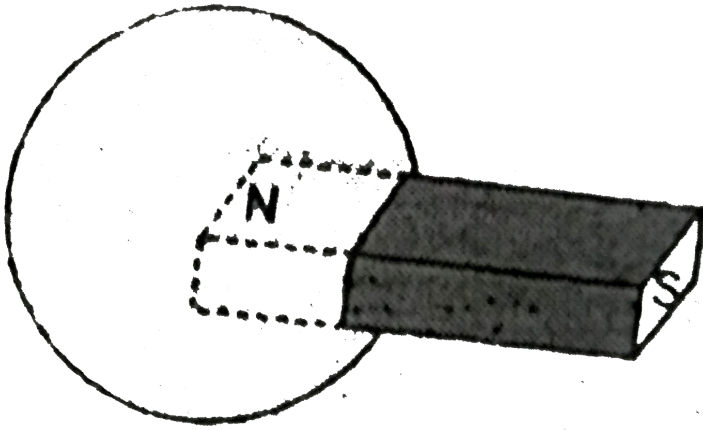
D. If both assertion and reason are false.

**Answer: C**



**Watch Video Solution**

2. Statement-1 The net magnetic flux through a spherical surface enclosing north pole of a bar magnet as zero



Statement-2 Magnetic field lines always form closed loops

- A. If both assertion and reason are true and reason is the correct explanation of assertion.
- B. If both assertion and reason are true but reason is the correct explanation of assertion.
- C. If assertion is true but reason is false
- D. If both assertion and reason are false.

**Answer: B**



**Watch Video Solution**

**3. Assertion :** Magnetic field interacts with a moving charge and not with a stationary charge.

**Reason :** A moving charge produces a magnetic field.

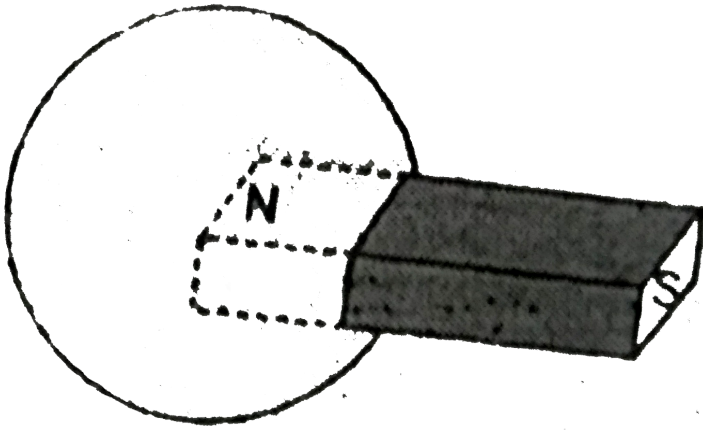
- A. If both assertion and reason are true and reason is the correct explanation of assertion.
- B. If both assertion and reason are true but reason is the correct explanation of assertion.
- C. If assertion is true but reason is false
- D. If both assertion and reason are false.

**Answer: A**



**Watch Video Solution**

**4. Statement-1** The net magnetic flux through a spherical surface enclosing north pole of a bar magnet as zero



Statement-2 Magnetic field lines always form closed loops

- A. If both assertion and reason are true and reason is the correct explanation of assertion.
- B. If both assertion and reason are true but reason is the correct explanation of assertion.
- C. If assertion is true but reason is false
- D. If both assertion and reason are false.

**Answer: A**



**Watch Video Solution**

5. Assertion: The energy of charged particle moving in uniform magnetic field does not change.

Reason: Work done by magnetic field on the charge is zero.

- A. If both assertion and reason are true and reason is the correct explanation of assertion.
- B. If both assertion and reason are true but reason is the correct explanation of assertion.
- C. If assertion is true but reason is false
- D. If both assertion and reason are false.

**Answer: A**



**Watch Video Solution**

6. Assertion: Cyclotron does not accelerate.

Reason: Mass of the electron is very small.



- A. If both assertion and reason are true and reason is the correct explanation of assertion.
- B. If both assertion and reason are true but reason is the correct explanation of assertion.
- C. If assertion is true but reason is false
- D. If both assertion and reason are false.

**Answer: A**



**Watch Video Solution**

7. Ampere's circuital law is given by



**Watch Video Solution**

**8. MAGNETIC FIELD DUE TO CURRENT CARRYING SOLENOID**

- A. If both assertion and reason are true and reason is the correct explanation of assertion.
- B. If both assertion and reason are true but reason is the correct explanation of assertion.
- C. If assertion is true but reason is false
- D. If both assertion and reason are false.

**Answer: B**



**View Text Solution**

**9. Statement1:** The magnetic field at the ends of very long current carrying solenoid is half of that at the centre.

**Statement2:** If the solenoid is sufficiently long, the field within it is uniform.

- A. If both assertion and reason are true and reason is the correct explanation of assertion.

B. If both assertion and reason are true but reason is the correct explanation of assertion.

C. If assertion is true but reason is false

D. If both assertion and reason are false.

**Answer: B**



**Watch Video Solution**

**10.** The two linear parallel conductors carrying currents in the opposite direction.....each other.

A. If both assertion and reason are true and reason is the correct explanation of assertion.

B. If both assertion and reason are true but reason is the correct explanation of assertion.

C. If assertion is true but reason is false

D. If both assertion and reason are false.

**Answer: D**



**Watch Video Solution**

**11.** Assertion: When a magnetic dipole is placed in a non-uniform magnetic field, only a torque acts on the dipole.

Reason: Force would also acts on dipole if magnetic field were uniform.

- A. If both assertion and reason are true and reason is the correct explanation of assertion.
- B. If both assertion and reason are true but reason is the correct explanation of assertion.
- C. If assertion is true but reason is false
- D. If both assertion and reason are false.

**Answer: D**

[Watch Video Solution](#)

**12. Assertion :** The net magnetic force on a current loop in a uniform magnetic field is zero but torque may or may not be zero.

**Reason :** Torque on a current carrying coil in a magnetic field is given by

$$\vec{\tau} = nI \left( \vec{A} \times \vec{B} \right).$$

- A. If both assertion and reason are true and reason is the correct explanation of assertion.
- B. If both assertion and reason are true but reason is not the correct explanation of assertion.
- C. If assertion is true but reason is false
- D. If both assertion and reason are false.

**Answer: B**

[Watch Video Solution](#)

13. *Assertion*: current sensitivity of a galvanometer is directly proportional to the current through the coil.

*Reason*: Voltage sensitivity is inversely proportional to voltage.

- A. If both assertion and reason are true and reason is the correct explanation of assertion.
- B. If both assertion and reason are true but reason is the correct explanation of assertion.
- C. If assertion is true but reason is false
- D. If both assertion is false but reason is true

**Answer: D**



**Watch Video Solution**

14. Write two reasons, why a galvanometer cannot be used as such to measure current in a given circuit.

- A. If both assertion and reason are true and reason is the correct explanation of assertion.
- B. If both assertion and reason are true but reason is the correct explanation of assertion.
- C. If assertion is true but reason is false
- D. If both assertion and reason are false.

**Answer: A**



[Watch Video Solution](#)

**15.** A moving coil galvanometer can be converted into an ammeter by



[Watch Video Solution](#)

**Others**

1. Ampere's circuital law is given by

A.  $\oint \vec{H} \cdot d\vec{l} = \mu_0 I_{\text{enc}}$

B.  $\oint \vec{B} \cdot d\vec{l} = \mu_0 I_{\text{enc}}$

C.  $\oint \vec{B} \cdot d\vec{l} = \mu_0 J$

D.  $\oint \vec{H} \cdot d\vec{l} = \mu_0 J$

**Answer: B**



**Watch Video Solution**

2. Two identical current carrying coaxial loops, carry current  $I$  in an opposite sense. A simple amperian loop passes through both of them once, calling the loop as  $C$ , which of the option is correct ?

A.  $\oint_C \vec{B} \cdot d\vec{l} = \pm 2\mu_0 J$

B. the value of  $\oint \vec{B} \cdot d\vec{l}$  is independent of sense of  $C$ .

C. there may be a point on  $C$  where  $B$  and  $d\vec{l}$  are parallel.



D. none of these

**Answer: B**



**Watch Video Solution**

3. A long straight wire in the horizontal plane carries a current of 75 A in north to south direction, magnitude and direction of field B at a point 3 m east of the wire is

- A.  $4 \times 10^{-6} T$ , vertical up
- B.  $5 \times 10^{-6} T$ , vertical down
- C.  $5 \times 10^{-6} T$ , vertical up
- D.  $4 \times 10^{-6} T$ , vertical down

**Answer: C**



**Watch Video Solution**

4. If a long straight wire carries a current of 40 A, then the magnitude of the field  $B$  at a point 15 cm away from the wire is

A.  $5.34 \times 10^{-5} T$

B.  $8.34 \times 10^{-5} T$

C.  $9.6 \times 10^{-5} T$

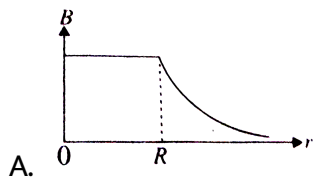
D.  $10.2 \times 10^{-5} T$

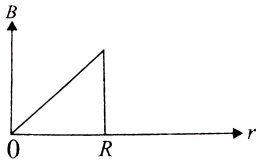
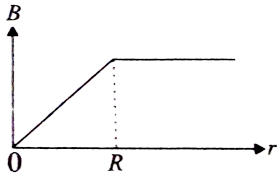
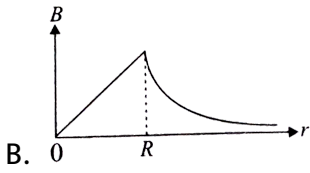
**Answer: A**



**Watch Video Solution**

5. The correct plot of the magnitude of magnetic field  $\vec{B}$  vs distance  $r$  from centre of the wire is, if the radius of wire is  $R$





**Answer: B**



**Watch Video Solution**