



PHYSICS

BOOKS - HT Olympiad Previous Year Paper

SAMPLE PAPER 4 (CLASS VII)

Section C Science

1. The distance between two airports is 2430 km. A jet takes 3 hours to cover this distance.

Calculate the speed of the jet.

A. 810 km/h

B. 680 km/h

C. 750 km/h



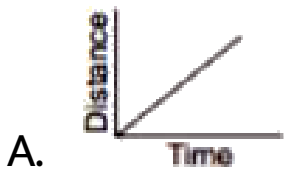
D. 930 km/h

Answer: A



Watch Video Solution

2. A body is stationary. Which of the graphs shown here is a graph of distance against time for this motion?



Answer: D



Watch Video Solution

3. Usually the maximum temperature of the day occurs in the while the minimum temperature occurs .

A. Morning, Night

B. Afternoon, early in the morning

C. Afternoon, evening

D. Early morning, night

Answer: B



Watch Video Solution