



## MATHS

### BOOKS - ICSE MODEL PAPER

### SAMPLE PAPER 2022

#### Section A

1. Find the value of a and b if x-1 and x-2 are factors of  $x^3 - ax + b$ .

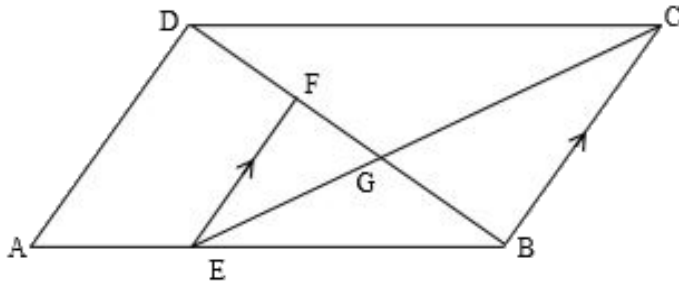


[Watch Video Solution](#)

2. In the figure given below, ABCD is a parallelogram. E is a point on AB. CE intersects the diagonal BD at G and EF is parallel to BC.

If  $AE : EB = 1 : 2$  find

EF : AD

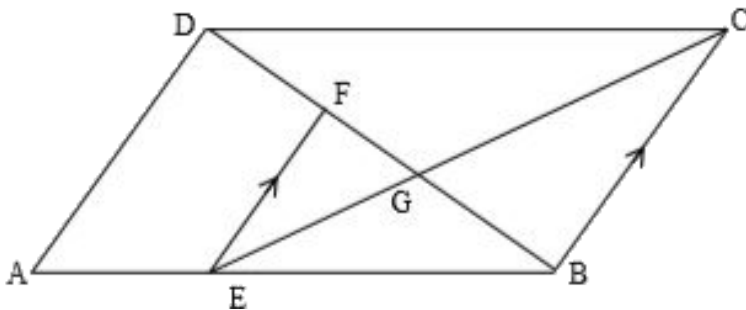


[Watch Video Solution](#)

3. In the figure given below, ABCD is a parallelogram. E is a point on AB. CE intersects the diagonal BD at G and EF is parallel to BC.

If  $AE : EB = 1 : 2$  find

area of triangle BEF : area of triangle ABD



[Watch Video Solution](#)

4. On a certain sum of money, the difference between the compound interest for a year, payable half-yearly, and the simple interest for a year is ₹ 180/-. Find the sum lent out, if the rate of interest in both the cases is 10% per annum.

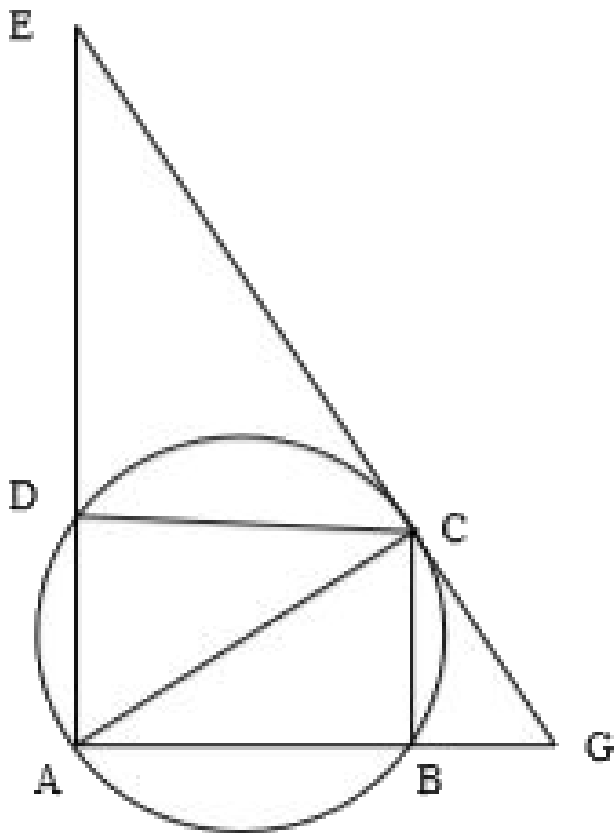
 [Watch Video Solution](#)

5. Plot the points A(9,6) and B(5,9) on the graph paper. These two points are the vertices of a figure ABCD which is symmetrical about  $x = 5$  and  $y = 6$ . Complete the figure on the graph. Write down the geometrical name of the figure.

 [Watch Video Solution](#)

6. In the diagram given below  $\angle EDC$ . The tangent drawn to the circle at C makes an angle of  $50^\circ$  with AB produced. Find the

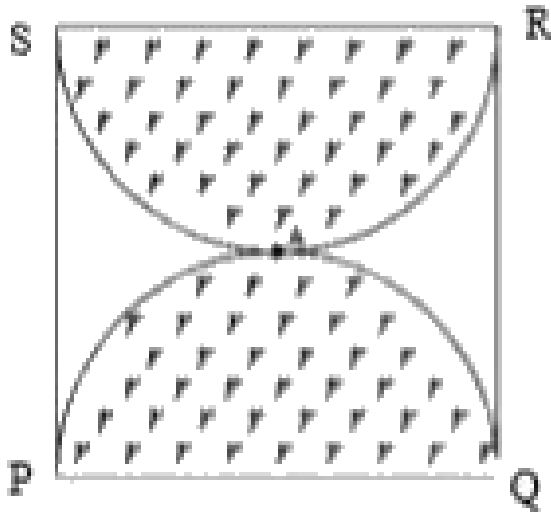
measure of  $\angle ACB$ .



[▶ Watch Video Solution](#)

7. PQRS is a square piece of land of side 56 m. Two semicircular grass covered lawns are made on two of its opposite sides as shown in the

figure. Calculate the area of the uncovered portion.



[Watch Video Solution](#)

8. If  $A = \begin{bmatrix} 4 & 4 \\ -2 & 6 \end{bmatrix}$  and  $B = \begin{bmatrix} 2 & 1 \\ 3 & -2 \end{bmatrix}$  find the matrix D such that

$$3A - 2B + 2D = 0$$

[Watch Video Solution](#)

9. A point  $P(a, b)$  is reflected in the Y-axis to  $P^1 (-3, 1)$

Write down the values of a and b.

$P^{11}$  is the image of P when reflected in the X axis.

Write down the coordinates of  $P^{11}$ .

$P^{111}$  is the image of P when reflected in the line  $X = 5$ .

Write down the coordinates of  $P^{111}$ .

 [Watch Video Solution](#)

10. Given :

$$A = \{x : 3 < 2x - 1 < 9, x \in R\}, B = \{x : 11 \leq 3x + 2 \leq 23, x \in R\}$$

where R is the set of real numbers.

Represent A and B on number lines

 [Watch Video Solution](#)

11. Given :

$$A = \{x : 3 < 2x - 1 < 9, x \in R\}, B = \{x : 11 \leq 3x + 2 \leq 23, x \in R\}$$

where  $R$  is the set of real numbers.

On the number line also mark  $A \cap B$

 [Watch Video Solution](#)

12. Without using a trigonometric table calculate:

$$4 \frac{\sin 32^\circ}{\cos 58^\circ} + 5 \frac{\tan 48^\circ}{\cot 42^\circ} - 8 \frac{\sec 72^\circ}{\operatorname{cosec} 18^\circ}$$

 [Watch Video Solution](#)

13. Mr. Jacob has a two years recurring deposit account in State Bank of India and deposits Rs.1500 per month. If he receives Rs.37,875 at the time of maturity, find the rate of interest.

 [Watch Video Solution](#)

14. Calculate the arithmetic mean, correct to one decimal place, for the following frequency distribution of marks obtained in a Geometry test.

Marks	0-10	10-20	20-30	30-40	40-50
No of students	7	13	15	12	3

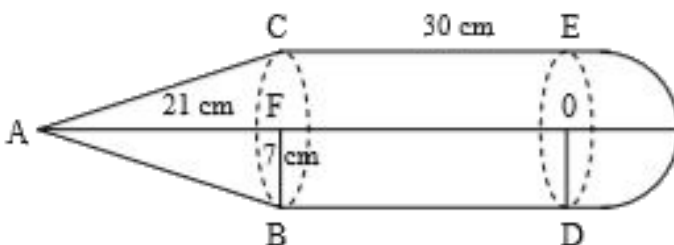
[▶ Watch Video Solution](#)

15. If  $\begin{bmatrix} 2 & 4 \\ 6 & 2 \end{bmatrix} \begin{bmatrix} 3x \\ 2 \end{bmatrix} + 2 \begin{bmatrix} 3 \\ 4 \end{bmatrix} = 5 \begin{bmatrix} 4 \\ y \end{bmatrix}$  find the values of x and y.

[▶ Watch Video Solution](#)

16. In the diagram given below if  $AF = 21$  cm,  $CE = 30$  cm and  $FB = 7$  cm.

Find the volume of the figure.







[Watch Video Solution](#)

**17.** A man bought 200 shares each of face value Rs.10 at Rs. 12 per share. At the end of the year, the company from which he bought the shares declares a dividend of 15%. Calculate:

the amount of money invested by the man



[Watch Video Solution](#)

**18.** A man bought 200 shares each of face value Rs.10 at Rs. 12 per share. At the end of the year, the company from which he bought the shares declares a dividend of 15%. Calculate:

the amount of dividend he received



[Watch Video Solution](#)

**19.** A man bought 200 shares each of face value Rs.10 at Rs. 12 per share. At the end of the year, the company from which he bought the shares declares a dividend of 15%. Calculate:  
the percentage return on his outlay.

 [Watch Video Solution](#)

## Section B

**1.** Solve the following quadratic equation for  $x$  and give your answer correct to three significant figures:

$$2x^2 - 4x - 3 = 0$$

 [Watch Video Solution](#)

2. An integer is chosen at random from 1 to 50. Find the probability that the number is:  
divisible by 5

 [Watch Video Solution](#)

3. An integer is chosen at random from 1 to 50. Find the probability that the number is:  
a perfect cube

 [Watch Video Solution](#)

4. An integer is chosen at random from 1 to 50. Find the probability that the number is:  
a prime number.

 [Watch Video Solution](#)

5. Find  $x$  from the following equation using properties of proportion:

$$\frac{x^2 - x + 1}{x^2 + x + 1} = \frac{14(x - 1)}{13(x + 1)}$$

 [Watch Video Solution](#)

6. Bosco wishes to start a  $200m^2$  rectangular vegetable garden. Since he has only 50 m barbed wire, he fences three sides of the rectangular garden letting his house compound wall act as the fourth side of the fence. Find the dimensions of the garden.

 [Watch Video Solution](#)

7. Construct a triangle  $ABC$ , with  $AB = 7$  cm,  $BC = 8$  cm and  $\angle ABC = 60^\circ$ . Locate by construction the point  $P$  such that :

$P$  is equidistant from  $AB$  and  $BC$ .

Measure and record the length of  $PB$ .



[Watch Video Solution](#)

8. Construct a triangle  $ABC$ , with  $AB = 7$  cm,  $BC = 8$  cm and  $\angle ABC = 60^\circ$ . Locate by construction the point  $P$  such that :

$P$  is equidistant from  $AB$  and  $BC$ .

Measure and record the length of  $PB$ .



[Watch Video Solution](#)

9. Construct a triangle  $ABC$ , with  $AB = 6$  cm,  $BC = 7$  cm and  $\angle ABC = 60^\circ$ . Locate by construction the point  $P$  such that (i)  $P$  is

equidistant from  $B$  and  $C$  (ii)  $P$  is equidistant from  $AB$  and  $BC$ . (iii)

Measure and record the length of  $PA$ .



[Watch Video Solution](#)

10. Mr. A. Ramchander has an account with Central Bank of India. The following entries are from his pass book:

Date	Particulars	Withdrawal	Deposits	Balance
05.01.2009	B/F			8000
20.01.2009	To self	2500		
04.02.2009	By cash		9000	
20.02.2009	By cash		3000	
04.03.2009	To self	1000		
15.04.2009	By cash		12000	

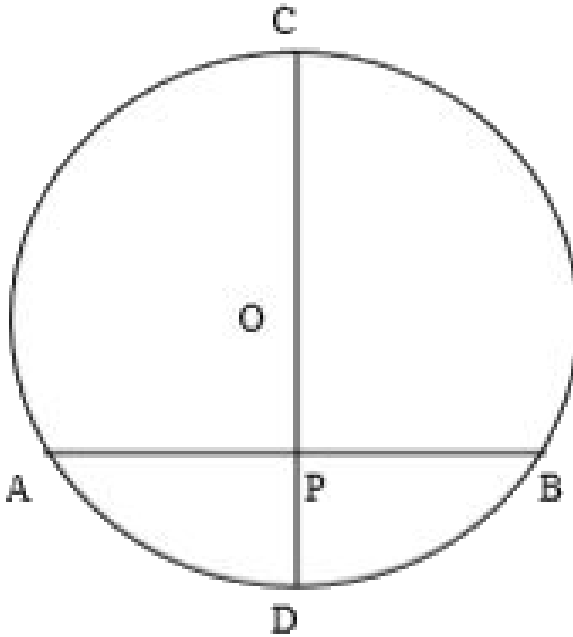
Complete the above page of his passbook and calculate the interest accumulated in four months, January to April at the rate of 3.5% per annum. If the interest is added on 30<sup>th</sup> April, find his balance on that date.

 [Watch Video Solution](#)

11. Prove that  $\frac{1}{\sec x - \tan x} + \frac{1}{\sec x + \tan x} = \frac{2}{\cos x}$

 [Watch Video Solution](#)

12. In the figure given below, CD is the diameter of the circle which meets the chord AB at P such that  $AP = BP = 12$  cm. If  $DP = 8$  cm, find the radius of the circle.



[▶ Watch Video Solution](#)

13. Prove that  $A(2, 1)$ ,  $B(0,3)$  and  $C(-2,1)$  are the three vertices of an isosceles right angled triangle. Hence find the coordinates of a point D, if ABCD is a square.



 [Watch Video Solution](#)

**14.** A fair dice is rolled. Find the probability of getting 3 on the face of the dice

 [Watch Video Solution](#)

**15.** A fair dice is rolled. Find the probability of getting an odd number on the face of the dice

 [Watch Video Solution](#)

**16.** A fair dice is rolled. Find the probability of getting a number greater than 1 on the face of the dice.

 [Watch Video Solution](#)



17. A (4,2), B(6,8) and C (8,4) are the vertices of a triangle ABC. Write down the equation of the median of the triangle through A.

 [Watch Video Solution](#)

18. The angle of elevation of an aeroplane from a point P on the ground is  $60^\circ$ . After 12 seconds from the same point P, the angle of elevation of the same plane changes to  $30^\circ$ . If the plane is flying horizontally at a speed of  $600\sqrt{3}$  km/h, find the height at which the plane is flying.

 [Watch Video Solution](#)

19. The following table shows the distribution of the heights of a group of students:

Height (cm)	140-145	145-150	150-155	155-160	160-165	165-170	170-175
No of students	8	12	18	22	26	10	4

Use a graph sheet to draw an Ogive for the distribution. Use the

Ogive to find:

the inter quartile range

 [Watch Video Solution](#)

**20.** The following table shows the distribution of the heights of a group of students:

Height (cm)	140-145	145-150	150-155	155-160	160-165	165-170	170-175
No of students	8	12	18	22	26	10	4

Use a graph sheet to draw an Ogive for the distribution. Use the

Ogive to find:

the number of students whose height is more than 168 cm

 [Watch Video Solution](#)

**21.** The following table shows the distribution of the heights of a group of students:

Height (cm)	140-145	145-150	150-155	155-160	160-165	165-170	170-175
No of students	8	12	18	22	26	10	4

Use a graph sheet to draw an Ogive for the distribution. Use the

Ogive to find:

the number of students whose height is less than 148 cm.

 [Watch Video Solution](#)

**22.** The manufacturer sold a TV to a wholesaler for Rs.7000. The wholesaler sold it to a trader at a profit of Rs.1000. If the trader sold it to the customer at a profit of Rs.1500, find:

the total VAT (value added tax) collected by the state government at the rate of 5% .

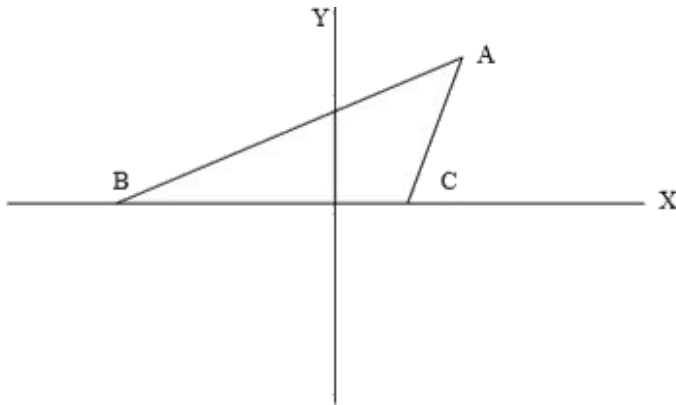
 [Watch Video Solution](#)

**23.** The manufacturer sold a TV to a wholesaler for Rs.7000. The wholesaler sold it to a trader at a profit of Rs.1000. If the trader sold

it to the customer at a profit of Rs.1500, find the amount that the customer pays for the TV.

[▶ Watch Video Solution](#)

24. In the diagram given below, equation of AB is  $x - \sqrt{3}y + 1 = 0$  and equation of AC is  $x - y - 2 = 0$

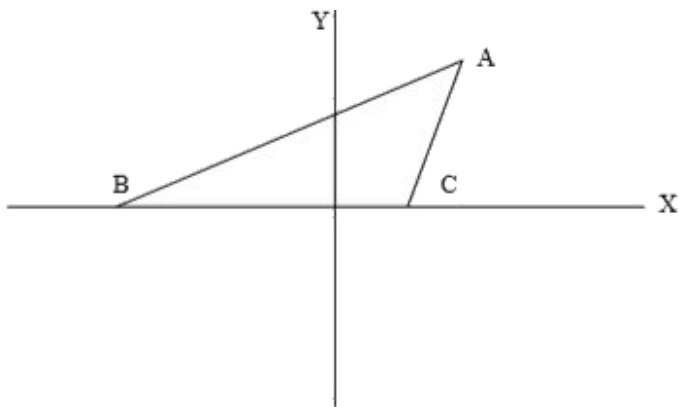


Find  $\angle BAC$ .

[▶ Watch Video Solution](#)

25. In the diagram given below, equation of AB is  $x - \sqrt{3}y + 1 = 0$

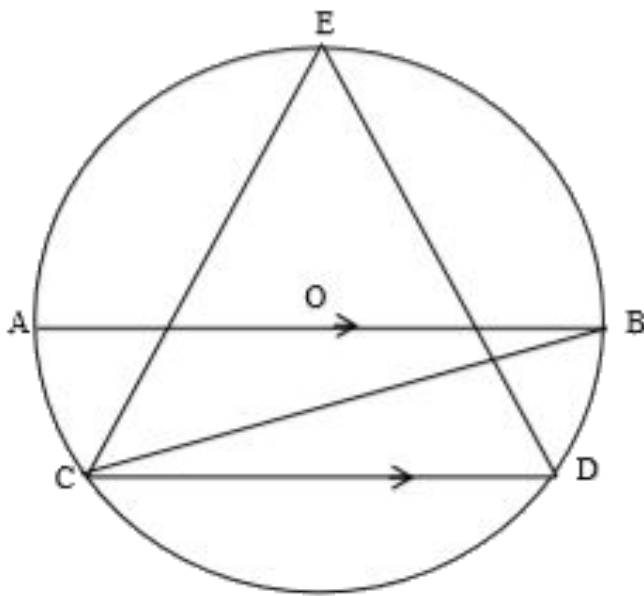
and equation of AC is  $x - y - 2 = 0$



Find  $\angle BAC$ .

[Watch Video Solution](#)

26. In the figure given below, O is the center of the circle. Chord CD is parallel to the diameter AB. If  $\angle ABC = 35^\circ$ , calculate  $\angle CED$ .



[▶ Watch Video Solution](#)

27. Construct a triangle ABC, given that  $AB = 6$  cm,  $BC = 5.6$  cm and  $AC = 6.5$  cm. Construct an incircle to triangle ABC and measure its radius.

[▶ Watch Video Solution](#)