



PHYSICS

BOOKS - AAKASH SERIES

UNITS AND MEASUREMENT

SHORT ANSWER TYPE QUESTIONS

1. How do the random errors differ from systematic errors?

 [Watch Video Solution](#)

2. What is meant by rounding off?

 [Watch Video Solution](#)

3. What are the rules for arithmetic operations with significant figures ?

 [Watch Video Solution](#)

4. How do the random errors differ from systematic errors?

 [Watch Video Solution](#)

5. What do you mean by significant figures?

 [Watch Video Solution](#)

6. What are the different types of errors that can occur in a measurement?

 [Watch Video Solution](#)

7. Define the term mean absolute error . How is this calculate ?

 [Watch Video Solution](#)

8. Define the term relative error . How is this calculate ?

 [Watch Video Solution](#)

9. Define the term precentage error. How is this calculate ?

 [Watch Video Solution](#)

10. Round off to 3 significant figures giving the rules followed (i) 25.87 (ii)

0.05134.

 [Watch Video Solution](#)

11. What are the fundamental quantities and supplementary quantities in S.I.? Give their units.

 [Watch Video Solution](#)

12. Explain the uses of dimensional analysis with one example for each.

 [Watch Video Solution](#)

13. Is there any limit for the number of fundamental (base) quantities? What are supplementary fundamental quantities? What are their units?

 [Watch Video Solution](#)

14. Give the limitations of dimensional analysis.

 [Watch Video Solution](#)

15. Using dimensional methods, verify the correctness of the following relations,

(i) $a = v^2 / r$, (ii) $F = mr\omega^2$, (iii) $S. T. = \rho h d g / 2$

In the above formulae 'r' stands for radius, 'm' for mass, ' ω ' for angular velocity, 'v' for linear velocity, 'h' for height, 'd' for density and S.T. for surface tension.

 [Watch Video Solution](#)

16. The velocity of a body is given by $v = At^2 + Bt + C$. If v and t are expressed in SI, what are the units of A, B and C?

 [Watch Video Solution](#)

VERY SHORT ANSWER TYPE QUESTIONS

1. We can reduce random errors by

 [Watch Video Solution](#)

2. Why is that for both very small as well as very large (in addition to ordinary) quantities, the physical measurements are usually expressed in scientific notation, with powers of ten ?

 [Watch Video Solution](#)

3. The unit of length, metre was originally defined as the distance between two fine lines engraved on gold plugs near the ends of a bar of platinum-iridium alloy that is kept 0° C. Then the unit was defined in October 1983 in terms of wavelength of kr. 86 radiation .

Now, the present unit is defined in terms of distance travelled by light .

In your opinion, which of the two essential requirements for a standard unit availability, invariability played the key role in this modification.

 [Watch Video Solution](#)

4. Originally the 'foot' of human being is taken as a unit of length. What condition prevents the use of human foot as a standard scientific fundamental (base) unit?

 [Watch Video Solution](#)

5. As far as mechanics is concerned all systems of units are having the same dimensions for a given physical quantity. But for thermodynamics, electricity, magnetism and electromagnetics this is not the case. Why?

 [Watch Video Solution](#)

6. If two quantities have same dimensions, do they represent same physical content?

 [Watch Video Solution](#)

7. Two physical quantities are having the same dimensions. Should their units be necessarily the same? Give an example supporting your answer.



[Watch Video Solution](#)

8. Why is the dimension of one fundamental (base) quantity in terms of any other fundamental (base) quantity is always zero.



[Watch Video Solution](#)

9. Assertion: A dimensionally wrong or inconsistent equation must be wrong.

Reason: A dimensionally consistent equation is an exact or a correct equation.



[Watch Video Solution](#)

10. State about the correctness or otherwise of the following two statements.

i) A physical quantity can have dimensions but no units.

ii) A physical quantity can have units but no dimensions.

 [Watch Video Solution](#)

11. Can we derive the kinematic relations $V = u + at$, $S = ut + \frac{1}{2}at^2$ and $V^2 = u^2 + 2as$. Explain the reason for your answer.

 [Watch Video Solution](#)

12. What is an error? What are constant errors?

 [Watch Video Solution](#)

13. What is the convenience in using SI?

 [Watch Video Solution](#)

14. Is dimensional analysis applicable to only SI ?

 [Watch Video Solution](#)

15. What is meant by Unit? What is the importance of a unit?

 [Watch Video Solution](#)

16. Define a coherent system of units.

 [Watch Video Solution](#)

17. Name two coherent systems of units.

 [Watch Video Solution](#)

18. What are the fundamental quantities and supplementary quantities in S.I.? Give their units.

 [Watch Video Solution](#)

19. Define elementary physical quantities .

 [Watch Video Solution](#)

20. What are the fundamental quantities and supplementary quantities in S.I.? Give their units.

 [Watch Video Solution](#)

21. Define a compounded physical quantity .

 [Watch Video Solution](#)

22. What is the importance of measurement?



[Watch Video Solution](#)

23. What are the derived units?



[Watch Video Solution](#)

24. What is meant by the principle of homogeneity of dimensions?



[Watch Video Solution](#)

NUMERICAL EXERCISE (LEVEL-1)

1. Derive the dimensions of Planck's constant. Which other quantity has similar dimensions?



[Watch Video Solution](#)

2. The dimensional formula of gravitational constant is

 [Watch Video Solution](#)

3. Dimensional formula formula for thermal conductivity is (here K denotes the temperature) :

 [Watch Video Solution](#)

4. Obtain the dimensional formula for the Angular impulse .

 [Watch Video Solution](#)

5. Obtain the dimensional formula for the Poisson's ratio.

 [Watch Video Solution](#)

6. Check the accuracy of the relation $C = \frac{\pi \eta r^4}{2l}$ for couple per unit twist (C) of a wire of length (l), radius (r) and coefficient of rigidity (η).

 [Watch Video Solution](#)

7. The kinetic energy of rotation (E_k) depends upon (i) angular momentum (J) : (ii) moment of inertia (i).

Find the relation by the method of dimensional analysis .

 [View Text Solution](#)

8. The significant figures of 0.007 is

 [Watch Video Solution](#)

9. State the number of significant figures in the following

(a) $0.007m^2$ (b) $2.64 \times 10^{24}kg$ (c) $0.2370g/cm^{-3}$

 [Watch Video Solution](#)

10. State the number of significant figures in the following

(a) $0.007m^2$ (b) $2.64 \times 10^{24}kg$ (c) $0.2370g/cm^{-3}$

 [Watch Video Solution](#)

11. State the number of significant figures in the $6.320J$

 [Watch Video Solution](#)

12. Write down the number of significant figure in the 6.032

 [Watch Video Solution](#)

13. What is the distance in km of quasar from which light takes 3 billion years to reach us? $c = 3 \times 10^5$ km/s.



 [Watch Video Solution](#)

14. It is claimed that two atomic clocks if allowed to run for 100 years, free from any disturbance, may differ by only about 0.02 second. In measuring a time interval of second what is the accuracy?

 [Watch Video Solution](#)

15. A substance having mass 5.74 g occupies a volume of 1.2cm^3 . Calculate its density with due regard to significant digits.

 [Watch Video Solution](#)

16. The diameter of a sphere is 4.24 m . Calculate its surface area with due regard to significant figures.

 [Watch Video Solution](#)

17. Find the value of the following addition with due consideration of significance figures $0.75 + 2.128 + 15.6$.

 [Watch Video Solution](#)

NUMERICAL EXERCISE (LEVEL-2)

1. If velocity of light c , Planck's constant h and gravitational constant G are taken as fundamental quantities, then express mass, length and time in terms of dimensions of these quantities.

 [Watch Video Solution](#)

2. The equation of state of a real gas is given by

$$\left(P + \frac{a}{V^2}\right)(V - b) = RT$$

where P , V and T are pressure, volume and temperature respectively and R

is the universal gas constant. The dimensions of the constant a in the above equation is

 [Watch Video Solution](#)

3. The number of particles crossing a unit area perpendicular to the $x - axis$ in a unit time is given by $n = -D \left(\frac{n_2 - n_1}{x_2 - x_1} \right)$, where n_1 and n_2 are the number of particles per unit volume at $x = x_1$ and x_2 , respectively, and D is the diffusion constant. The dimensions of D are

 [Watch Video Solution](#)

4. The density of a material in C.G.S. system is $8g/cm^3$. In a system of units in which unit of length is 5 cm and unit of mass is 20g. What is the density of the material?

 [Watch Video Solution](#)

5. In an experiment of simple pendulum the errors in the measurement of length of the pendulum L and time period T are 3% and 2% respectively. Find the maximum percentage error in the value of acceleration due to gravity.

A. 5 %

B. 8 %

C. 6 %

D. 7 %

Answer: D



[Watch Video Solution](#)

6. A scientist performs an experiment and takes 100 readings. He repeats the same experiment and now takes 500 readings, By doing this what is the advantage?



[Watch Video Solution](#)

7. Find the number of significant figures in the following numbers.

(i) 6729 , (ii) 0.024 ,(iii) 6.0023 , (iv) 2.520×10^7 , (v) 0.08240

(vi) 4200 , (vii) 4.57×10^8 , (viii) 91.000



[Watch Video Solution](#)

8. Find the number of significant figures in the following numbers.

(i) 6729 , (ii) 0.024 ,(iii) 6.0023 , (iv) 2.520×10^7 , (v) 0.08240

(vi) 4200 , (vii) 4.57×10^8 , (viii) 91.000



[Watch Video Solution](#)

9. Find the number of significant figures in the following numbers.

(i) 6729 , (ii) 0.024 ,(iii) 6.0023 , (iv) 2.520×10^7 , (v) 0.08240

(vi) 4200 , (vii) 4.57×10^8 , (viii) 91.000



[Watch Video Solution](#)

10. Find the number of significant figures in the 2.520×10^7

 [Watch Video Solution](#)

11. State the number of significant figures in the following

0.08240

 [Watch Video Solution](#)

12. Find the number of significant figures in the 4200

 [Watch Video Solution](#)

13. Find the number of significant figures in the 4.51×10^8

 [Watch Video Solution](#)

14. Find the number of significant figures in the 91.00



[Watch Video Solution](#)

15. A stick has a length of 12.132 cm and another stick has a length of 12.4 cm.

If the two sticks are placed end to end , what is their total length ?



[Watch Video Solution](#)

16. The length of a rod is 2.5 cm and diameter is 2.5 mm. The volume of the rod with due consideration to significant figures is



[Watch Video Solution](#)

17. An experiment measures quantities a , b and c , and X is calculated from $X = ab^2/c^3$. If the percentage error in a , b and c are $\pm 1\%$, $\pm 3\%$ and

$\pm 2\%$ respectively, the percentage error in X will be -



[Watch Video Solution](#)

18. A new unit of length is chosen such that the speed of light in vacuum is unity. What is the distance between the sun and the Earth in terms of the new unit if light takes 8 min and 20 s to cover this distance?



[Watch Video Solution](#)

19. The dimensional formula for a physical quantity x is $[M^{-1}L^3T^{-2}]$. The errors in measuring the quantities M , L , and T , respectively are 2% , 3% , and 4% . The maximum percentage of error that occurs in measuring the quantity x is



[Watch Video Solution](#)

20. The measured mass the volume of a body are 2.42 and 4.7 cm^3 respectively with possible errors 0.01 g , and 0.1 cc. The find the maximum error in density.

 [Watch Video Solution](#)

21. A substance having mass 5.74 g occupies a volume of 1.2 cm^3 .
Caluclate its density with due regard to significant digits.

 [Watch Video Solution](#)

QUESTIONS FOR DESCRIPTIVE ANSWERS

1. In the formula $X = 3YZ^2$, X and Z have dimensions of capacitance and magnetic induction respectively . What are the dimensions of Y in MESQ system ?

 [Watch Video Solution](#)

2. In the expression $P = EL^2m^{-5}G^{-2}$, E, m, L and G denote energy, mass, angular momentum and gravitational constant, respectively. Show that P is a dimensionless quantity.

 [Watch Video Solution](#)

3. A physical quantity P is related to four observably a,b,c and d as follows $P = a^3b^3/c^{1/2}d$. The percentage errors of measurement in a,b,c and d are 1%, 3%, 4% and 2% respectively. What is the percentage error in the quantity P? If the value of P calculated using the above relation turns out to be 3.763, to what value should you round off the result?

 [Watch Video Solution](#)

4. A gas bubble from an explosion under water oscillates with a period T proportional to $p^a d^b E^c$ where p is the static pressure d is the density of water and E is the total energy of explosion. Find the value of a,b and c.



[Watch Video Solution](#)

5. If unit of mass is taken as 1 kg, of time a 1 minute and that acceleration due to gravity is taken as $9.81ms^{-2}$. What is the unit of energy?



[Watch Video Solution](#)

6. Each side of a cube is measured to be 7.203 m. what are the total surface area and the volume of the cube to appropriate significant figures ?



[Watch Video Solution](#)

7. The density of a cube is measured by measuring its mass and the length of its sides. If the maximum errors in the measurement of mass and length are 3% and 2%, respectively, then find the maximum error in the measurement of the density of cube.



[Watch Video Solution](#)

PROBLEMS

1. If the size of a nucleus (in the range of 10^{-15} to $10^{-14}m$) is scaled up to the tip of a sharp pin, what roughly is the size of an atom? Assume tip of the pin to be in the range $10^{-5}m$ to $10^{-4}m$.

 [Watch Video Solution](#)

2. The moon is observed from two diametrically opposite points A and B on Earth. The angle θ subtended at the moon by the two directions of observation is $1^\circ 54'$. Given the diameter of the Earth to be about $1.276 \times 10^7 m$, compute the distance of the moon from the earth.

 [Watch Video Solution](#)

3. A man wishes to estimate the distance of a nearby tower from him. He stands at a point A in front of the tower C and spots a very distant object O in line with AC. He then walks perpendicular to AC upto B, a distance of 100m and looks at O and C again. Since O is very distant, the direction of BO is practically the same as AO, but he finds the line of sight of C shifted from the original line of sight by an angle $\theta = 40^\circ$ (θ is known as parallax). Estimate the distance fo the tower C from his original position A.

 [Watch Video Solution](#)

4. Convert Newton into dyne.

 [Watch Video Solution](#)

5. Convert the unit of work done from MKS system to CGS system (i.e. joule)

 [Watch Video Solution](#)

[Watch Video Solution](#)

6. If velocity , time and force were chosen as basic quantities , find the dimensions of mass and energy .

[Watch Video Solution](#)

7. Check the correctness of the formula $f = \frac{mv^2}{r^2}$ where f is force , m is mass , v is velocity and r is radius.

[Watch Video Solution](#)

8. Check the correctness of the formula $S = ut + \frac{1}{3}at^2$ where S is the distance , u is velocity , a is acceleration and t is time.

[Watch Video Solution](#)

9. State how does the time period of a simple pendulum depend on mass of bob.

 [Watch Video Solution](#)

10. The period T_0 for a planet of mass 'm' above the sun in a circular orbit of radius R depends on m,R and G where G is the gravitational constant. Find expression for time period by dimensional methods.

 [Watch Video Solution](#)

11. If energy E, velocity V and time T are taken as fundamental units, the dimensional formula for surface tension is

 [Watch Video Solution](#)

12. If velocity of light c , planck's constant h and gravitational constant G are taken as fundamental quantities then the dimensions of the length will be



[Watch Video Solution](#)

13. Suppose you system of units has one years as the unit of time , one light year as the unit of length and mass of earth as the unit of mass. How much 1 N be equal to the units of force in this system. Take 1 year = $3 \times 10^5 s$, 1 light year = $9.5 \times 10^{15} m$ and mass of earth = $6 \times 10^{24} kg$.



[Watch Video Solution](#)

14. Write down 2302 m , 0.0034 m and 2.001 in the scientific way.



[Watch Video Solution](#)

15. The length of a straight line is measured a number of times by a number of observers. The following are the results of these measurements. Decide precision and accuracy.

Actual length = $3.785 \text{ cm} \pm 0.001 \text{ cm}$

1st set of measurement 3.8 cm , 3.9 cm , 3.7 cm

2nd set of measurements 3.478 cm , 3.479 cm , 3.478 cm , 3.478 cm , 3.479 cm

3rd set of measurement 3.55 cm , 3.65 cm , 3.45 cm , 3.45 cm , 3.35 cm
4th set of measurements 3.784 cm , 3.785 cm , 3.784 cm , 3.785 cm , 3.784 cm



[Watch Video Solution](#)

16. Two clocks are being tested against a standard clock located in a national laboratory. At 12:00:00 noon by the standard clock, the readings of the two clocks are :

	Clock 1	Clock 2
Monday	12:00:06	10:15:08
Tuesday	12:01:25	10:14:59
Wednesday	11:59:06	10:15:28
Thursday	12:01:50	10:15:07
Friday	11:59:25	10:14:42
Saturday	12:01:40	10:15:14
Sunday	12:01:29	10:15:21

If you are doing an experiment that requires 'precision time interval' measurements, which of the two clocks will you prefer ?

 [Watch Video Solution](#)

17. In an experiment the value of refractive index of glass was found to be 1.54, 1.53, 1.44, 1.54, 1.56 and 1.45 in successive measurements. Calculate (i) the mean value of refractive index (ii) absolute error of each measurement (iii) mean absolute error (iv) relative error and (v) percentage error.

 [Watch Video Solution](#)

18. The readings of a length come out to be 2.63 m , 2.56 m , 2.42 m , 2.71 m and 2.80 m . Calculate the absolute errors and relative errors or percentage errors.



[Watch Video Solution](#)

19. If $L = 2.06 \text{ cm} \pm 0.02 \text{ cm}$, $B = 1.11 \text{ cm} \pm 0.03 \text{ cm}$. What are $(L+B)$ and $(L-B)$ equal to ?



[Watch Video Solution](#)

20. If $L = 2.01 \text{ m} \pm 0.01 \text{ m}$, what is $3L$?



[Watch Video Solution](#)

21. If $L = 20.04 \text{ m} \pm 0.01 \text{ m}$, $B = 2.52 \text{ m} \pm 0.02 \text{ m}$. What are the values of $(L \times B)$ and $(L + B)$?



Watch Video Solution

22. If $L_1 = 2.02m \pm 0.01m$, $L_2 = 1.02m \pm 0.01m$, determine $L_1 + 2L_2$



Watch Video Solution

23. One side of a cube is measured as $a = 4.03 \pm 1\%$. What is its value?



Watch Video Solution

24. In the measurement of a physical quantity $X = A^2 \frac{B}{C^{1/3}} D^3$ The percentage errors introduced in the measurement of the quantities A, B, C and D are 2%, 2%, 4% and 5% respectively. Then, the minimum amount of percentage error in the measurement of X is contributed by



Watch Video Solution

25. In Poiseuille's method of determination of viscosity , what is the physical quantity that requires greater accuracy in measurement ?

$$\text{Formula } \eta = \frac{\pi Pr^4}{8VI}$$



[Watch Video Solution](#)

26. In an experiment of simple pendulum, the errors in the measurement of length of the pendulum (L) and time period (T) are 3% and 2% respectively. The maximum percentage error in the value of L/T^2 is



[Watch Video Solution](#)

27. The measured mass and volume of a body are 2.42 g and 4.7 cm^3 respectively with possible errors 0.01 g and 0.1 cm^3 . Find the maximum error in density.



[Watch Video Solution](#)

28. If error in measurement of radius of a sphere is 1%, what will be the error in measurement of volume?

 [Watch Video Solution](#)

29. Two resistors of resistances $R_1 = 100 \pm 3$ ohm and $R_2 = 200 \pm 4$ ohm are connected (a) in series , (b) in parrallel. Find the equivalent resistance of the (a) series combination , (b) parallel combination . Use for

(a) the relation $R = R_1 + R_2$ and for (b)

$$\frac{1}{R} = \frac{1}{R_1} + \frac{1}{R_2} \text{ and } \frac{\Delta R'}{R'^2} = \frac{\Delta R_1}{R_1^2} + \frac{\Delta R_2}{R_2^2}$$

 [Watch Video Solution](#)

30. In an experiment to determine the value of acceleration due to gravity g using a simple pendulum , the measured value of lenth of the pendulum is 31.4 cm known to 1 mm accuracy and the time period for 100 oscillations of pendulum is 112.0 s known to 0.01 s accuracy . find the accuracy in determining the value of g .

 [Watch Video Solution](#)

31. If $L = 20.04 \text{ m} \pm 0.01 \text{ m}$, $B = 2.52 \text{ m} \pm 0.02 \text{ m}$. What are the values of $(L \times B)$ and $(L + B)$?

 [Watch Video Solution](#)

32. The significant figures of 0.007 is

 [Watch Video Solution](#)

33. Write down the number of significant figure in the 2.64×10^{34}

 [Watch Video Solution](#)

34. State the number of significant figures in the following

(a) 0.007 m^2 (b) $2.64 \times 10^{24} \text{ kg}$ (c) $0.2370 \text{ g} / \text{cm}^{-3}$



[Watch Video Solution](#)

35. The respective number of significant figures for the numbers 6.320, 6.032, 0.0006032 are



[Watch Video Solution](#)

36. State the number of significant figures in the following

6.032



[Watch Video Solution](#)

37. The respective number of significant figures for the numbers 6.320, 6.032, 0.0006032 are



[Watch Video Solution](#)

38. 20.96 rounded off to 3 significant figures is



Watch Video Solution

39. Round off to 3 significant figure.

0.0003125



Watch Video Solution

40. A stick has a length of 12.132 cm and another stick has a length of 12.4 cm.

If the two sticks are placed end to end , what is their total length ?



Watch Video Solution

41. A stick has a length of 12.132 cm and another stick has a length of 12.4 cm.

If the two sticks are placed side by side, what is the difference in their lengths ?

 [Watch Video Solution](#)

42. Find the value of $2.2 + 4.08 + 3.125 + 6.3755$.

 [Watch Video Solution](#)

43. Solve with due regard to significant figure.

$$46.7 - 10.04 =$$

 [Watch Video Solution](#)

44. Solve with due regard to significant figure.

$$(3.0 \times 10^{-8}) + (4.5 \times 10^{-6}) =$$

 [Watch Video Solution](#)

45. Find the number of significant figures in the following numbers.

(i) 6729 , (ii) 0.024 ,(iii) 6.0023 , (iv) 2.520×10^7 , (v) 0.08240

(vi) 4200 , (vii) 4.57×10^8 , (viii) 91.000

 [Watch Video Solution](#)

46. The diameter of a sphere is 4.24 m . Calculate its surface area with due regard to significant figures.

 [Watch Video Solution](#)

47. Find the value of the following addition with due consideration of significance figures $0.75 + 2.128 + 15.6$.

 [Watch Video Solution](#)

48. If a circular piece of tin has a measured radius of 2.6 cm . What is circumference ?

 [Watch Video Solution](#)

49. Find the value of $31.2 - 12.125$ with due consideration of significant figures.

 [Watch Video Solution](#)

50. The length of a rod is 2.5 cm and diameter is 2.5 mm. The volume of the rod with due consideration to significant figures is

 [Watch Video Solution](#)

51. The moon is observed from two diametrically opposite points A and B on Earth. The angle θ subtended at the moon by the two directions of

observation is $1^{\circ}54'$. Given the diameter of the Earth to be about $1.276 \times 10^7 m$, compute the distance of the moon from the earth.

 [Watch Video Solution](#)

52. Calculate the angular of (a) 1° (degree) (b) $1'$ (minute of arc or arcmin) and (c) $1''$ (second of arc or arc second) in radians. Use $360^{\circ} = 2\pi$ rad, $1^{\circ} = 60'$ and $1' = 60''$

 [Watch Video Solution](#)

53. A man wishes to estimate the distance of a nearby tower from him. He stands at a point A in front of the tower C and spots a very distant object O in line with AC. He then walks perpendicular to AC upto B, a distance of 100m and looks at O and C again. Since O is very distant, the direction of BO is practically the same as AO, but he finds the line of sight of C shifted from the original line of sight by an angle $\theta = 40^{\circ}$ (θ is known as parallax). Estimate the distance to the tower C from his original position A.



[Watch Video Solution](#)

54. If the size of a nucleus (in the range of 10^{-15} to $10^{-14}m$) is scaled up to the tip of a sharp pin, what roughly is the size of an atom? Assume tip of the pin to be in the range $10^{-5}m$ to $10^{-4}m$.



[Watch Video Solution](#)

55. The length of a straight line is measured a number of times by a number of observers. The following are the results of these measurements. Decide precision and accuracy.

Actual length = $3.785 \text{ cm} \pm 0.001 \text{ cm}$

1st set of measurement 3.8 cm , 3.9 cm , 3.7 cm

2nd set of measurements 3.478 cm , 3.479 cm , 3.478 cm , 3.478 cm , 3.479 cm

3rd set of measurement 3.55 cm , 3.65 cm , 3.45 cm , 3.45 cm , 3.35 cm
4th set of measurements 3.784 cm , 3.785 cm , 3.784 cm , 3.785 cm , 3.784 cm



[Watch Video Solution](#)

56. Two clocks are being tested against a standard clock located in the national laboratory. At 10:00:00 AM by the standard clock, the readings of the clocks are :

Day	Clock A	Clock B
1 st	10 : 00 : 05	8 : 15 : 00
2 nd	10 : 01 : 12	8 : 15 : 01
3 rd	9 : 59 : 08	8 : 15 : 04
4 th	10 : 01 : 13	8 : 14 : 58
5 th	9 : 58 : 10	8 : 15 : 03

If you are doing an experiment that requires precision time interval measurements, which of the two clock will you prefer ?

- (a) Clock A
- (b) Clock B
- (c) Either Clock A or B
- (d) Neither A nor B

57. In an experiment the value of refractive index of glass was found to be 1.54, 1.53, 1.44, 1.54, 1.56 and 1.45 in successive measurements. Calculate (i) the mean value of refractive index (ii) absolute error of each measurement (iii) mean absolute error (iv) relative error and (v) percentage error.

 [Watch Video Solution](#)

58. Readings of length of a pole are 2.63m, 2.56m, 2.71m and 2.80 m. Calculate the absolute errors and relative errors and percentage errors. What do you think of the actual value of the length and its limits?

 [Watch Video Solution](#)

59. If $L = 2.06 \text{ cm} \pm 0.02 \text{ cm}$, $B = 1.11 \text{ cm} \pm 0.03 \text{ cm}$. What are $(L+B)$ and $(L-B)$ equal to ?

 [Watch Video Solution](#)

60. Two objects A and B are of lengths 5 cm and 7cm determined with errors 0.1 cm and 0.2 cm respectively. What is the error in determining (a) the total length and (b) the difference in their lengths?

 [Watch Video Solution](#)

61. If $L = 2.01 \text{ m} \pm 0.01 \text{ m}$, what is $3L$?

 [Watch Video Solution](#)

62. If $L_1 = 2.02 \text{ m} \pm 0.01 \text{ m}$, $L_2 = 1.02 \text{ m} \pm 0.01 \text{ m}$, determine $L_1 + 2L_2$

 [Watch Video Solution](#)

63. The length and breadth of a rectangular object are 25.2 cm and 16.8 cm respectively and have been measured to an accuracy of 0.1 cm. Find

the relative error and percentage error in the area of the object.

 [Watch Video Solution](#)

64. In an experiment to determine the value of acceleration due to gravity g using a simple pendulum, the measured value of length of the pendulum is 31.4 cm known to 1 mm accuracy and the time period for 100 oscillations of pendulum is 112.0 s known to 0.01 s accuracy. Find the accuracy in determining the value of g .

 [Watch Video Solution](#)

65. If $L = 20.04 \text{ m} \pm 0.01 \text{ m}$, $B = 2.52 \text{ m} \pm 0.02 \text{ m}$. What are the values of $(L \times B)$ and $(L + B)$?

 [Watch Video Solution](#)

66. One side of a cube is measured as $a = 4.03 \pm 1\%$. What is its value?



[Watch Video Solution](#)

67. The density of a cube is measured by measuring its mass and the length of its sides. If the maximum errors in the measurement of mass and length are 3% and 2%, respectively, then find the maximum error in the measurement of the density of cube.



[Watch Video Solution](#)

68. If error in measurement of radius of a sphere is 1%, what will be the error in measurement of volume?



[Watch Video Solution](#)

69. An experiment measured quantity a , b , c and then x is calculated from $x = ab^2/c^3$. If the percentage error in a , b , c are $\pm 1\%$, $\pm 3\%$ and $\pm 2\%$ respectively, the percentage error in x can be,



[Watch Video Solution](#)

70. The percentage errors in the measurement of mass and speed are 2% and 3% respectively. The error in kinetic energy obtained by measuring mass and speed, will be

 [Watch Video Solution](#)

71. A rectangular metal slab of mass 33.333 g has its length 8.0 cm, breadth 5.0 cm and thickness 1mm. The mass is measured with accuracy up to 1 mg with a sensitive balance. The length and breadth are measured with a vernier calipers having a least count of 0.01 cm. The thickness is measured with a screwgauge of least count 0.01 mm. Calculate the percentage accuracy in density from above measurements.

 [Watch Video Solution](#)

72. The error in the measurement of the length of a simple pendulum is 0.1% and the error in the time period is 2%. What is the possible percentage of error in the physical quantity having the dimensional formula LT^{-2} ?

 [Watch Video Solution](#)

73. The heat generated in a circuit is dependent upon the resistance, current and time for which the current is flown. If the error in measuring the above are 1%, 2% and 1% respectively, then maximum error in measuring the heat is

 [Watch Video Solution](#)

74. Two resistors of resistances $R_1 = 100 \pm 3$ ohm and $R_2 = 200 \pm 4$ ohm are connected (a) in series, (b) in parallel. Find the equivalent resistance of the (a) series combination, (b) parallel combination. Use for

(a) the relation $R = R_1 + R_2$ and for (b)

$$\frac{1}{R} = \frac{1}{R_1} + \frac{1}{R_2} \text{ and } \frac{\Delta R'}{R'^2} = \frac{\Delta R_1}{R_1^2} + \frac{\Delta R_2}{R_2^2}$$

 [Watch Video Solution](#)

75. The period of oscillation of a simple pendulum is $T = 2\pi\sqrt{\frac{L}{g}}$.

Measured value of L is 20.0 cm known to 1 mm accuracy and time for 100 oscillations of the pendulum is found to be 90 s using wrist watch of 1 s resolution. The accuracy in the determination of g is :

 [Watch Video Solution](#)

76. Write down the number of significant figures in the following.

(i) 0.007 (ii) 2.64×10^{24} (iii) 0.2390

(iv) 6.320 (v) 6.032 (vi) 0.0006032

 [Watch Video Solution](#)

77. Round off to 3 significant figures (a) 20.96 and (b) 0.0003125

 [Watch Video Solution](#)

78. Find the value of $2.2 + 4.08 + 3.125 + 6.3755$.

 [Watch Video Solution](#)

79. An electric kettle has two coils. When one of these is switched on, the water in the kettle boils in 6 minutes. When the other coil is switched on, the water boils in 3 minutes. If the two coils are connected in series, the time taken to boil the water in the kettle is

 [Watch Video Solution](#)

80. Solve with due regard to significant figures.

(i) $46.7 - 10.4 =$ (ii) $(3.0 \times 10^{-8}) + (4.5 \times 10^{-6}) =$

[Watch Video Solution](#)

81. Find the product of 1.2, 2.54 and 3.257 with due regard to significant figures.

[Watch Video Solution](#)

82. Enthalpy change of a reaction will be equal to

[Watch Video Solution](#)

83. Find out the results of the following operations.

(i) 117.3×0.0024 (ii) $9.27 \div 41$

(iii) 42×0.041 (iv) $124.2 + 52.487$

(v) $124.2 - 52.487$ (vi) $\sqrt{58.97}$

(vii) $(17.5)^2$.

[Watch Video Solution](#)

84. The mass of 1.2 cm^3 of a certain substance is 5.74g. Calculate its density with due regard to significant figures.

 [Watch Video Solution](#)

85. If a circular piece of tin has a measured radius of 2.6 cm . What is circumference ?

 [Watch Video Solution](#)

86. The diameter of a sphere is 4.24 m . Calculate its surface area with due regard to significant figures.

 [Watch Video Solution](#)

87. Each side of a cube is measured to be 7.203 m. what are the total surface area and the volume of the cube to appropriate significant figures

?



Watch Video Solution

88. The refractive index of the material of the prism and liquid are 1.56 and 1.32 respectively. What will be the value of θ for the following refraction ?



Watch Video Solution

89. Convert Newton into dyne.



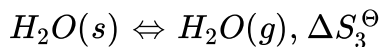
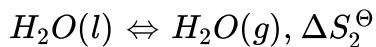
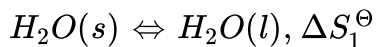
Watch Video Solution

90. Convert the unit of work done from MKS system to CGS system (i.e. joule)



Watch Video Solution

91. Select the correct statements for the equilibrium under standard conditions.

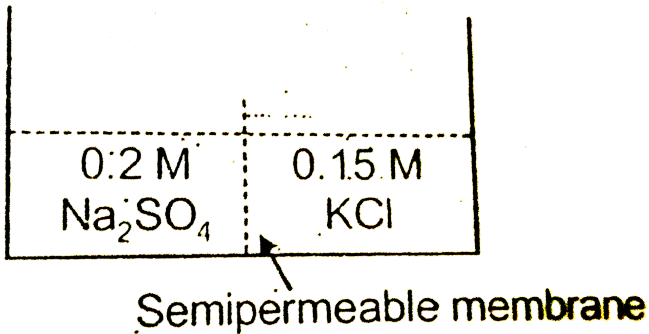


 [Watch Video Solution](#)

92. Check the correctness of the formula $S = ut + \frac{1}{3}at^2$ where S is the distance, u is velocity, a is acceleration and t is time.

 [Watch Video Solution](#)

93. Consider the following arrangement and choose the correct options



[Watch Video Solution](#)

94. Derive an expression for the time period (T) of a simple pendulum which may depend upon the mass (m) of the bob, length (l) of the pendulum and acceleration due to gravity (g).

[Watch Video Solution](#)

95. A gas bubble from an explosion under water oscillates with a period T proportional to $p^a d^b E^c$ where p is the static pressure d is the density of

water and E is the total energy of explosion. Find the value of a, b and c .

 [Watch Video Solution](#)

96. Derive an expression for the rate of flow of a liquid through a capillary tube. Assume that the rate of flow depends on (i) pressure gradient $\left(\frac{p}{l}\right)$, (ii) The radius, r and (iii) the coefficient of viscosity, η . The value of the proportionality constant $k = \frac{\pi}{8}$.

 [Watch Video Solution](#)

97. The dimensional formula of the product of two physical quantities P and Q is ML^2T^{-2} . The dimensional formula of P/Q is ML^0T^{-2} . Then what are the units of physical quantities P and Q .

 [Watch Video Solution](#)

98. If the equation of state of a gas is expressed as $\left(P + \frac{a}{V^2}\right)(V - b) = RT$ where P is the pressure, V is the volume and T the absolute temperature and a, b, R are constants, then find the dimensions of 'a' and 'b' ?

 [Watch Video Solution](#)

99. In the expression $P = EL^2m^{-5}G^{-2}$, E, m, L and G denote energy, mass, angular momentum and gravitational constant, respectively. Show that P is a dimensionless quantity.

 [Watch Video Solution](#)

100. If pressure P, velocity V and time T are taken as fundamental physical quantities, the dimensional formula of force is

 [Watch Video Solution](#)

101. If unit of mass is taken as 1 kg, of time a 1 minute and that acceleration due to gravity is taken as $9.81ms^{-2}$. What is the unit of energy?



[Watch Video Solution](#)

EXERCISE - I

1. Atomic clock generally used in the national standards, is based on the periodic vibrations produced in a

- A. cesium atom
- B. carbon atom
- C. hydrogen atom
- D. krypton atom

Answer: A



[Watch Video Solution](#)

2. Which one of the following methods is used to measure distance of a planet or a star from the earth?

- A. the parallel method
- B. the least count method.
- C. the null method.
- D. the parallax method

Answer: D



[Watch Video Solution](#)

3. SI unit of coefficient of thermal conductivity

- A. $Wm^{-1}K^{-1}$
- B. $Wm^{-2}K^{-1}$
- C. WmK^{-1}

D. WmK^{-2}

Answer: A



[Watch Video Solution](#)

4. Which of the following is not a unit of time?

A. Leap year

B. Lunar month

C. Light year

D. sidereal year

Answer: C



[Watch Video Solution](#)

5. Unit used to measure nuclear diameters is

- A. fermi
- B. angstrom
- C. micron
- D. nanometre

Answer: A

 [Watch Video Solution](#)

6. Parsec' is the unit of

- A. Time
- B. Distance
- C. Impulse
- D. Moment of inertia

Answer: B

 [Watch Video Solution](#)

7. In measuring electric energy, 1 kWh is equal to

A. $36kJ$

B. $36 \times 10^{-5} J$

C. $360J$

D. $36 \times 10^5 J$

Answer: D



[Watch Video Solution](#)

8. The dimensional formula of a pseudo force is

A. $M^0 L^0 T^{-1}$

B. $M^0 L^0 T^0$

C. $M^0 LT^0$

D. MLT^{-2}

Answer: D



Watch Video Solution

9.1 fermi is equal to

A. 10^7 micron

B. 10^{-5} angstrom unit

C. 10^{-3} nanometre

D. none of the above

Answer: B



Watch Video Solution

10. One shake is equal to

A. $10^{-8} s$

B. $10^{-9} s$

C. $10^{-10} s$

D. $10^9 s$

Answer: A



Watch Video Solution

11. If P is X-ray unit and Q is micron, then $\frac{P}{Q} =$

A. 10^7

B. 10^{-7}

C. 10^5

D. 10^{-3}

Answer: B



Watch Video Solution

12. Which of the following is not expressed correctly with respect to units?

A. Specific heat $\rightarrow JKg^{-1}K^{-1}$

B. Entropy $\rightarrow JK^{-1}$

C. Thermal capacity $\rightarrow JKg^{-1}$

D. Temperature gradient $\rightarrow m^{-1}K$

Answer: C



[Watch Video Solution](#)

13. Unit of Stefan's constant is :-

A. $Wm^{-2}k^{-4}$

B. $Jm^{-2}K^{-4}$

C. $Wm^{-1}K^{-1}$

D. $Wm^{-2}K^{-2}$

Answer: A



Watch Video Solution

14. A and B are the numerical values of a physical quantity and C and D are its units in two systems of measurement . If $C > D$, then

A. $A > B$

B. A less than B

C. $A = B$

D. A & B cannot be related

Answer: B



Watch Video Solution

15. Derived unit is

- A. candela
- B. steradian
- C. ampere
- D. volt

Answer: D



[Watch Video Solution](#)

16. $JKg^{-1}K^{-1}$ is the unit of

- A. Boltzmann constant
- B. PLANCK'S constant
- C. Gas constant
- D. all the above

Answer: C



Watch Video Solution

17. The ratio of SI Unit to CGS unit of Planck's constant is

A. 10^7

B. 10^{-7}

C. 10^3

D. 10^5

Answer: A



Watch Video Solution

18. The dimensional formula for coefficient of viscosity is

A. $ML^{-1}T$

B. $ML^{-1}T^{-1}$

C. MLT^{-1}

D. $M^{-1}L^{-1}T$

Answer: B



Watch Video Solution

19. $[ML^{-1}T^{-2}]$ is the dimensional formula of

A. Modulus of Elasticity

B. Stress

C. Pressure

D. all the above

Answer: D



Watch Video Solution

20. Heat and Thermal capacity differ in the dimensions of

- A. Mass
- B. length
- C. Time
- D. Temperature

Answer: D



[Watch Video Solution](#)

21. Force constant and surface tension have the same dimensions in

- A. Mass
- B. length
- C. Time
- D. all the above

Answer: D



[Watch Video Solution](#)

22. Which of the following physical quantities has a unit but no dimensions?

A. Intensity of sound

B. Solid angle

C. Strain

D. Relative density

Answer: B



[Watch Video Solution](#)

23. $\frac{x^2}{\text{mass}}$ has dimensions of kinetic energy. Then x has the dimensions of

A. Pressure

B. Torque

C. Moment of Inertia

D. Impulse

Answer: D



[Watch Video Solution](#)

24. The quantity having negative dimensions in mass is

A. Gravitational Potential

B. Gravitational constant

C. Acceleration due to gravity

D. None of the above

Answer: B



[Watch Video Solution](#)

25. $h d G$ has the dimensions of (h = height , d = density , G = Gravitational constant)

- A. Pressure
- B. Power
- C. Torque
- D. Acceleration

Answer: D



[Watch Video Solution](#)

26. The quantity having dimensions only in temperature is

- A. Latent heat
- B. Entropy
- C. Specific heat

D. Coefficient of linear expansion

Answer: D

 [Watch Video Solution](#)

27. The dimensional formula for areal velocity is

A. $M^0 L^2 T$

B. $M^0 L^2 T^{-1}$

C. $M^0 L^3 T^{-1}$

D. $M^0 L T^{-2}$

Answer: B

 [Watch Video Solution](#)

28. The value of Planck's constant is

A. Power

B. Angular frequency

C. Wavelength

D. Energy

Answer: D



[Watch Video Solution](#)

29. If x times momentum is work, then the dimensions of x are

A. LT^{-1}

B. $L^{-1}T$

C. $ML^{-1}T^{-1}$

D. MLT

Answer: A



[Watch Video Solution](#)

30. The dimensional formula of magnetic induction B is

A. $MT^{-1}A^{-1}$

B. $MT^{-2}A^{-1}$

C. MTA^{-2}

D. $MT^{-2}A$

Answer: B



Watch Video Solution

31. The physical quantity which has dimensional formula as that of

$$\frac{\text{Energy}}{\text{mass} \times \text{length}} \text{ is}$$

A. Force

B. Power

C. Pressure

D. Acceleration

Answer: D



[Watch Video Solution](#)

32. The modulus of elasticity is dimensionally equivalent to

A. Stress

B. Surface tension

C. Strain

D. Coefficient of viscosity

Answer: A



[Watch Video Solution](#)

33. Planck constant has the same dimensions as

A. Energy

B. Power

C. Linear momentum

D. Angular momentum

Answer: D



Watch Video Solution

34. The fundamental unit which has same power in the dimensional formula of surface tension and viscosity is

A. mass

B. length

C. Time

D. none

Answer: A

 Watch Video Solution

35. The dimensions of thermal resistance are

A. $M^{-1}L^{-2}T^3K^{-1}$

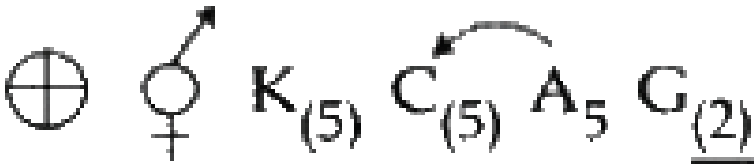
B. $M^0L^0T^{-2}$

C. MLT^4

D. MLT^{-1}

Answer: B

 Watch Video Solution



36. _____ is the floral formula of :

A. $M^0 L^0 T^{-1}$

B. MLT^1

C. $ML^0 T^{-1}$

D. $M^0 LT^{-2}$

Answer: A



Watch Video Solution

37. The dimensional formula of coefficient of kinematic viscosity is

A. $M^0 L^{-1} T^{-1}$

B. $M^0 L^2 T^{-1}$

C. $ML^2 T^{-1}$

D. $ML^{-1} T^{-1}$

Answer: B



Watch Video Solution

38. The fundamental physical quantities that have same dimensions in the dimensional formula of torque and Angular momentum are

- A. mass, time
- B. time, length
- C. mass, length
- D. time , mole

Answer: C



[Watch Video Solution](#)

39. The thermodynamic property that measures the extent of molecular disorder is called entropy. Entropy change of phase transformation can be calculated using Trouton's formula ($\Delta S = \Delta H / T$). In the reversible adiabatic process, however, ΔS will be zero. the rise in temperature in isobaric and isochoric conditions is found to increase the randomness or

entropy of the system.

$$\Delta S = 2.303C \log(T_1/T_2)$$

The melting point of a solid is $200K$ and its latent heat of fusion is 400cal mol^{-1} . The entropy changes for the fusion of 1 mole of the solid (in cal K^{-1}) at the same temperature would be

A. MLT^{-2}

B. ML^2T^{-2}

C. $M^0L^2T^{-2}$

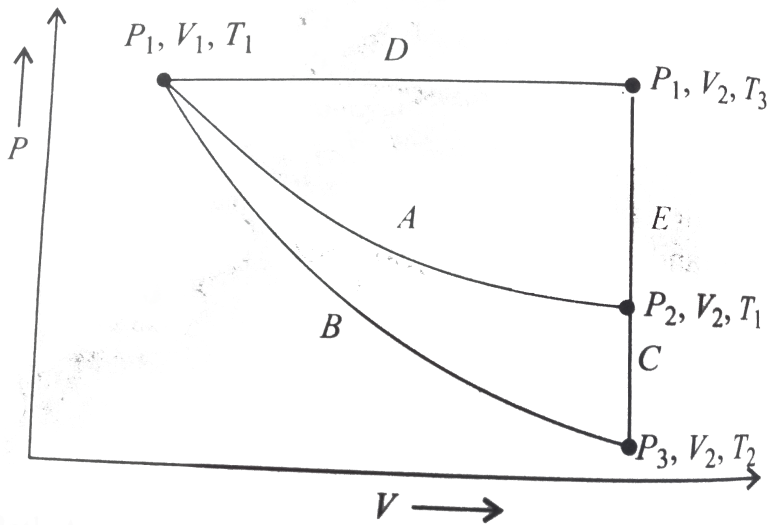
D. MLT^{-1}

Answer: C



[Watch Video Solution](#)

40. For an ideal gas, an illustration of three different paths A , $(B + C)$ and $(D + E)$ from an initial state P_1, V_1, T_1 to a final state P_2, V_2, T_1 is shown in the given figure.



Path *A* represents a reversible isothermal expansion from P_1, V_1 to P_2, V_2 , Path $(B + C)$ represents a reversible adiabatic expansion (*B*) from $P_1, V_1, T_1 \rightarrow P_3, V_2, T_2$ followed by reversible heating the gas at constant volume (*C*) from P_3, V_2, T_2 to P_2, V_2, T_1 . Path $(D + E)$ represents a reversible expansion at constant pressure P_1 (*D*) from P_1, V_1, T_1 to P_1, V_2, T_3 followed by a reversible cooling at constant volume V_2 (*E*) from $P_1, V_2, T_3 \rightarrow P_2, V_2, T_1$.

What is q_{rev} , for path *A*?

- A. Stress
- B. Young's modulus
- C. Pressure

D. all the above

Answer: D

 [Watch Video Solution](#)

41. The dimensional formula for angular momentum is

A. ML^2T^{-1}

B. ML^3T^{-1}

C. MLT^{-1}

D. ML^3T^{-2}

Answer: A

 [Watch Video Solution](#)

42. The physical quantity that has no dimensions is

- A. Angular velocity
- B. Linear momentum
- C. Angular momentum
- D. Strain

Answer: D

 [Watch Video Solution](#)

43. The energy density and pressure have

- A. Same dimensions
- B. Different dimensions
- C. No dimensions
- D. None

Answer: A

 [Watch Video Solution](#)

44. The dimensional formula ML^2T^{-2} represents

- A. Moment of a force
- B. Force
- C. Acceleration
- D. Momentum

Answer: A



[Watch Video Solution](#)

45. The dimensional formula of torque is

- A. M^2LT^{-2}
- B. ML^2T^{-2}
- C. $M^{-1}L^2T^{-2}$

D. MLT^{-2}

Answer: B



Watch Video Solution

46. What is the dimensional formula of angular velocity?

A. $M^{-1}L^1T^0$

B. $M^0L^{-1}T^{-1}$

C. $M^{-1}L^{-1}T^0$

D. $M^0L^0T^{-1}$

Answer: D



Watch Video Solution

47. What is meant by faraday 's constant?

- A. mass
- B. length
- C. Time
- D. all the above

Answer: A

 [Watch Video Solution](#)

48. Which of the following is the most precise instrument for measuring length?

- A. a vernier callipers with 20 divisions on the sliding scale
- B. a screw gauge of pitch 1 mm and 100 divisions on the circular scale
- C. an optical instrument that can measure length to within a wavelength of light
- D. all the above

Answer: C



[Watch Video Solution](#)

49. The value of g at depth h is two third the value that on the earth's surface. The value of h in terms of radius of earth R is

- A. more accuracy but less precision
- B. less accurate but less precision
- C. more accuracy but more precision
- D. less accuracy but more precision

Answer: A



[Watch Video Solution](#)

50. The errors due to imperfect design or calibration of the measuring instrument are

- A. Random errors
- B. Percent errors
- C. Personal errors
- D. Systematic errors

Answer: D

 [Watch Video Solution](#)

51. For example, if you , by habit, always hold your head a bit too far to the right while reading the position of a needle on the scale, you will introduce an error called as

- A. Random errors
- B. Perfect errors
- C. Parallax errors
- D. Least count errors

Answer: C



[Watch Video Solution](#)

52. By improving experimental techniques, selecting better instruments and removing personal bias as far as possible, the errors can be minimised

- A. Random errors
- B. Perfect errors
- C. Least count errors
- D. Systematic errors

Answer: D



[Watch Video Solution](#)

53. Unpredictable fluctuations in temperature, voltage supply, mechanical vibrations of experimental set-ups , etc, lead to

- A. Random errors
- B. Perfect errors
- C. Least count errors
- D. Systematic errors

Answer: A

 [Watch Video Solution](#)

54. In a measurement, a choice of change of different units

- A. does not change the number of significant figures
- B. increase the number of significant figures
- C. decrease the number of significant figures
- D. may increase or may decrease the number of significant figures

Answer: A

 [Watch Video Solution](#)

55. Zero error in an instrument introduces

- A. Systematic error
- B. Random error
- C. 1 and 2 both
- D. Gross error

Answer: A



[Watch Video Solution](#)

56. Which of the following is systematic error

- A. least count error
- B. Parallax error
- C. Theoretical error

D. all

Answer: D



[Watch Video Solution](#)

57. (A) : Increasing the number of observations minimizes random errors.

(R) : Positive and negative random errors occur with equal probability.

- A. Both (A) and (R) are true and (R) is the correct explanation of (A)
- B. Both (A) and (R) are true and (R) is not the correct explanation of (A)
- C. (A) is true but (R) is false
- D. (A) is false but (r) is true.

Answer: A



[Watch Video Solution](#)

58. By repeating the same measurement several times, the errors that can be reduced are

- A. determinate errors
- B. instrumental errors
- C. random errors
- D. Systematic errors

Answer: D



[Watch Video Solution](#)

59. In an experiment if the measured values of a physical quantity have a high degree of closeness to the true value. These measurements are said to be

- A. accurate
- B. precise

C. both precise and accurate

D. neither accurate nor precise

Answer: B



[Watch Video Solution](#)

60. In an experiment if the measured values of a physical quantity have a high degree of closeness to the true value . These measurements are said to be

A. both precise and accurate

B. precise

C. accurate

D. niether accurate not precise

Answer: C



[Watch Video Solution](#)

61. The measured value of physical quantity expressed to infinite number of decimals places is called

- A. practical value
- B. ideal value
- C. absolute value
- D. real value

Answer: B



[Watch Video Solution](#)

62. The arithmetic mean of several measurements is called

- A. practical value
- B. imaginary value
- C. true value

D. ideal value

Answer: C



Watch Video Solution

63. Zero errors of measuring instruments are called

- A. Indeterminate errors
- B. Random error
- C. Disproportional errors
- D. Instrumental errors

Answer: D



Watch Video Solution

64. Two heterozygous parents ($AaBb$) are crossed if the two loci are completely linked (AB/ab) what would be the distribution of phenotypic features in resulting generation of test cross ?

- A. determinate errors
- B. instrumental errors
- C. proportional errors
- D. random errors

Answer: D



[Watch Video Solution](#)

65. Which of the following is a true nut?

- A. least count error
- B. Zero error
- C. Backlash error

D. Theoretical error due to approximate

Answer: C



[Watch Video Solution](#)

66. Of the following the dimensionless error is

A. Systematic error

B. Gross error

C. random errors

D. Relative error

Answer: D



[Watch Video Solution](#)

67. When a screw gauge of least count 0.01 mm is used to measure the diameter of a wire, the reading on the sleeve is found to be 1 mm and the reading on the thimble is found to be 27 divisions. If the zero error + 0.005 cm, what is the correct diameter ?

- A. Random errors
- B. Systematic error
- C. Gross error
- D. Personal error

Answer: B



[Watch Video Solution](#)

68. Among the following the error that can be eliminated is

- A. Systematic error
- B. Random error

C. Gross error

D. None

Answer: A



Watch Video Solution

69. Which of the following time measuring devices is most precise

A. A wall clock

B. A stop watch

C. A digital watch

D. An atomic clock

Answer: D



Watch Video Solution

70. In determining viscosity (η) by poiseuille's method for formula used $\eta = \frac{\pi pr^4}{8vl}$. Which of the quantities in the formula must be measured more accurately

A. p

B. r

C. v

D. l

Answer: B



Watch Video Solution

71. The set of quantities which can form a group of fundamental quantities in any system of measurement is

A. Length, Mass and Time

B. Length, Mass and velocity

C. Mass , time and velocity

D. Length, Time and velocity

Answer: D



[Watch Video Solution](#)

72. The set of quantities which can form a group of fundamental quantities in any system of measurement is

A. Velocity, Acceleration and Force

B. Energy, Velocity and Time

C. Force, Power and Time

D. all the above

Answer: D



[Watch Video Solution](#)

73. Boltzman constant and Plank's constant differ in the dimensions of

- A. Mass and Time
- B. Length and Time
- C. Length and Mass
- D. Time and temperature

Answer: D



[Watch Video Solution](#)

74. The pair of physical quantities having the same dimensions is

- A. Power and Torque
- B. Thermal capacity and specific heat
- C. Latent heat and gravitational potential
- D. Angular momentum and Impulse

Answer: C



Watch Video Solution

75. A scalar quantity and a vector quantity having the same dimensions are

- A. Gravitational Potential and latent heat
- B. Force and Tension
- C. Specific heat and gas constant
- D. Frequency and velocity gradient

Answer: D



Watch Video Solution

76. The pair of physical quantities having the same dimensions is

- A. Moment of force and Torque
- B. Angular velocity and velocity gradient
- C. Thermal capacity and entropy
- D. Planck's constant and angular momentum

Answer: C

 [Watch Video Solution](#)

77. The pair of vector quantities having the same dimensions is

- A. Force and Impulse
- B. Moment of inertia and Moment of the couple
- C. Surface tension and Force constant
- D. Thrust and weight

Answer: D

 [Watch Video Solution](#)

78. Planck constant has the same dimensions as

- A. Magnetic susceptibility
- B. Magnetic moment
- C. Intensity of magnetizing field
- D. Magnetic permeability

Answer: C



[Watch Video Solution](#)

79. A uniform round object of mass M , radius R and moment of inertia about its centre of mass I_{cm} has a light, thin string wrapped several times around its circumference. The free end of string is attached to the ceiling and the object is released from rest. Find the acceleration of centre of the object and tension in the string. [Take $\frac{I_{cm}}{MR^2} = k$]

- A. the square of linear moment
- B. the square of angular momentum
- C. angular impulse
- D. planck's constant

Answer: B

 [Watch Video Solution](#)

80. The correct statement is :

- A. The proportionality constant in an equation can be obtained by dimensional analysis
- B. The equation $V = u + at$ can be derived by dimensional method
- C. the equation $y = A \sin wt$ can not be derived by dimensional method
- D. The equation $\eta = \frac{A}{B} e^{-Bt}$ can be derived with dimensional analysis

Answer: C



[Watch Video Solution](#)

81. SI unit and CGS unit of certain quantity vary by 10^3 times. That quantity is

- A. Boltzmann constant
- B. Gravitational constant
- C. Planck's constant
- D. Angular momentum

Answer: B



[Watch Video Solution](#)

82. The pair of physical quantities having the same dimensional formula are

- A. Mometum, impulse

B. Momentum , energy

C. Energy, pressure

D. Force, power

Answer: A



[Watch Video Solution](#)

83. The pair of physical quantities not having the same dimensional formula is

A. Acceleration, gravitational field strength

B. Torque, angular momentum

C. Pressure , modulus of elasticity

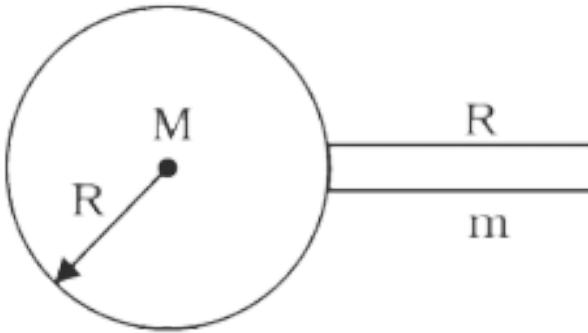
D. All the above

Answer: B



[Watch Video Solution](#)

84. A uniform thin rod mass m and length R is placed normally on surface of a solid uniform sphere of mass M and radius R as shown. Then the magnitude of gravitational force exerted by the sphere on the rod is:



A. $a > b > c$

B. $a > c > b$

C. $b > a > c$

D. $c > a > b$

Answer: D



Watch Video Solution

85. Unit of magnetic induction field B is

A. tesla

B. Wbm^{-2}

C. $N(Am)^{-1}$

D. all the above

Answer: D



Watch Video Solution

86. S.I unit of Electric intensity is

A. Hm^{-1}

B. Nm^{-1}

C. Vm^{-1}

D. NC

Answer: C



Watch Video Solution

87. Which of the following expression is correct?

A. Magnetic permeability $\rightarrow Fm^{-1}$

B. Permittivity $\rightarrow Hm^{-1}$

C. Relative permittivity $\rightarrow Vm^{-1}$

D. Intensity of Magnetizing field $\rightarrow Am^{-1}$.

Answer: D



Watch Video Solution

88. Find SI units of thermal resistance.

A. Wk^{-1}

B. $W^{-1}k$

C. $W^{-1}k^{-1}$

D. $Wm^{-1}k^{-1}$

Answer: B



Watch Video Solution

89. Dimensional formula of Intensity of magnetization is

A. IL

B. IL^{-2}

C. IL^{-1}

D. $I^{-1}L$

Answer: C



Watch Video Solution

90. The dimensional formula of the physical quantity whose S.I. unit is farad is

A. $ML^2T^3I^{-2}$

B. $M^{-1}L^{-3}T^4I^2$

C. $M^{-1}L^{-2}T^4I^2$

D. $M^{-1}L^{-2}T^3I^2$

Answer: C



[Watch Video Solution](#)

91. Bond energies can be obtained by using the following relation:

$$\Delta H(\text{reaction}) = \sum \text{Bond energy of bonds, broken in the reactants}$$

$$- \sum \text{Bond energy fo bonds, formed in the products}$$

Bond energy depends on three factors:

- Greater is the bond length, lesser is the bond energy.
- Bond energy increases with the bond multiplicity.

c. Bond energy increases with electronegativity difference between the bonding atoms.

The heat of formation of NO from its elements is $+90kJmol^{-1}$, What is the approximate bond dissociation energy of the bond in NO ?

$$BE_{N=N} = 941kJmol^{-1} \quad BE_{O=O} = 499kJmol^{-1}$$

A. $ML^2T^{-2}I^{-2}$

B. $MLT^{-2}I^{-2}$

C. $M^2L^2T^{-2}I^{-2}$

D. MLT^2I^2

Answer: B



[Watch Video Solution](#)

92. The pair of quantities having neither units nor dimensions is

A. plane angle and specific gravity

B. Magnetic permeability and Relative permittive

C. Coefficient of friction of coefficient of restitution

D. Linear moment and Angular momentum

Answer: C



[Watch Video Solution](#)

93. Dimensionless quantity is

A. Intensity level of sound

B. Magnetic susceptibility

C. Refractive index

D. all the above

Answer: D



[Watch Video Solution](#)

94. Dielectric constant has the same dimensions as

- A. Stress
- B. Strain
- C. Electric capacity
- D. Electric permittivity

Answer: B



[Watch Video Solution](#)

95. the dimensions of electric current in electric conductivity are

- A. 1
- B. 2
- C. 3
- D. - 2

Answer: B



[Watch Video Solution](#)

96. Choose the false statement

- A. Relative permittivity is a dimensionless constant
- B. Angular displacement has neither units not dimensions
- C. Refractive index is dimensionless variable
- D. Permeability of vaccum is a dimensional constant

Answer: B



[Watch Video Solution](#)

97. Assertion:Relative magnetic permeability has no units and no dimensions.

Reason: $\mu_r = \frac{\mu}{\mu_0}$, where the symbols have their standard meaning.

A. Focal power and Magnifying power

B. Tension and surface Tension

C. Force and Electromotive force

D. Power and electric power

Answer: D



Watch Video Solution

98. $\frac{he}{4\pi m}$ has the same dimensions as (h = Planck's constant , e = charge ,
m = mass.)

A. Magnetic moment

B. Magnetic induction

C. Angular moment

D. Pole strength

Answer: A

 [Watch Video Solution](#)

99. $\frac{M}{Vr}$ has the dimensions of (M = Magnetic moment, V = velocity , r = radius)

- A. Pole strength
- B. Electric charge
- C. Electric potential
- D. Force

Answer: B

 [Watch Video Solution](#)

100. The dimensional formula for the capacitance of a capacitor is

- A. $M^{-1}L^{-2}T^{-4}I^2$
- B. $M^{-1}L^{-2}T^4I^2$

C. $ML^2T^{-4}I^{-2}$

D. $ML^{-2}T^4I^{-2}$

Answer: B



[Watch Video Solution](#)

101. The SI unit of magnetic flux is

A. Wb/m^2

B. Am^2

C. Oersted

D. Weber

Answer: D



[Watch Video Solution](#)

102. The physical quantities not having same dimensions are

- A. torque and work
- B. momentum and Planck's constant
- C. Stress and Young's modulus
- D. Speed and $(\mu_0 \epsilon_0)^{-1/2}$

Answer: B



[Watch Video Solution](#)

103. Fundamental unit out of the following is

- A. ampere
- B. newton
- C. ohm
- D. Weber

Answer: A



[Watch Video Solution](#)

104. The ratio of SI unit of CGS unit of a physical constant is 10^7 . That constant is

- A. Universal gas constant
- B. Universal gravitational constant
- C. Magnetic induction c
- D. Impulse

Answer: A



[Watch Video Solution](#)

105. Electron volt is the unit of

- A. power
- B. Potential
- C. Electron charge
- D. Energy

Answer: D

 [Watch Video Solution](#)

106. The unit of reduction factor of tangent galvanometer

- A. Ampere
- B. Gauss
- C. Radian
- D. None

Answer: A

 [Watch Video Solution](#)

107. The *SI* unit of magnetic permeability is

A. Am^{-1}

B. Am^{-2}

C. Hm^{-1}

D. Hm^{-2}

Answer: C



[Watch Video Solution](#)

108. $ML^2T^{-2}I^{-2}$ is the dimensional formula for

A. Self inductance

B. Magnetic induction

C. Magnetic moment

D. Electric conductance

Answer: A



[Watch Video Solution](#)

109. Magnetic induction and magnetic flux differ in the dimensions of

A. Mass

B. Electric current

C. Length

D. Time

Answer: C



[Watch Video Solution](#)

110. Electromotive force and Electric potential differ in the dimensions of

A. Mass

B. Length

C. Electric current

D. None of the above

Answer: D



[Watch Video Solution](#)

111. Let $[\epsilon_0]$ denote the dimensional formula of the permittivity of vacuum.

If M = mass, L = length, T = time and A = electric current, then:

A. $\epsilon_0 = M^{-1}L^2T^{-1}A$

B. $\epsilon_0 = M^{-1}L^{-3}T^2A$

C. $\epsilon_0 = M^{-1}L^{-3}T^4A^2$

D. $\epsilon_0 = M^{-1}L^2T^{-1}A^{-2}$

Answer: C

 [Watch Video Solution](#)

112. Which of the following pairs is related as in work and force ?

- A. Electric potential and Electric intensity
- B. Momentum and velocity
- C. Impulse and force
- D. Resistance and voltage

Answer: A

 [Watch Video Solution](#)

113. The dimensional formula for magnetic flux is

- A. $ML^2T^{-2}I^{-1}$
- B. $ML^2T^{-2}I^{-2}$
- C. $ML^{-2}T^{-2}I^{-1}$

D. $ML^{-2}T^{-2}I^{-2}$

Answer: A



Watch Video Solution

114. The unit and dimensions of impedance in terms of charge Q are

A. ohm, $ML^2T^{-2}Q^{-2}$

B. ohm $ML^2T^{-1}Q^{-2}$

C. ohm, $ML^2T^{-2}Q^{-1}$

D. ohm, $MLT^{-1}Q^{-1}$

Answer: B



Watch Video Solution

115. If energy E , velocity V and time T are taken as fundamental units, the dimensional formula for surface tension is

A. $MLT^{-1}A^{-1}$

B. $MLT^{-2}A^{-2}$

C. $M^{-1}L^{-3}T^{+4}A^2$

D. $M^2L^{-2}T^{-2}A^2$

Answer: C



[Watch Video Solution](#)

116. Dimensions of $\frac{1}{\mu_0 \epsilon_0}$, where symbols have their usual meaning are

A. $L^{-1}T$

B. L^2T^2

C. L^2T^{-2}

D. LT^{-1}

Answer: C



[Watch Video Solution](#)

117. Of the following quantities, which one has dimensions different from the remaining three ?

- A. Energy per unit volume
- B. Force per unit area
- C. Product of voltage and charge per unit volume
- D. Angular momentum

Answer: D



[Watch Video Solution](#)

118. Dimensional formula of self-inductance is

A. $[MLT^{-2}A^{-2}]$

B. $[ML^2T^{-1}A^{-2}]$

C. $[ML^2T^{-2}A^{-2}]$

D. $[ML^2T^2A^1]$

Answer: C



Watch Video Solution

119. An electric kettle has two coils. When one of these is switched on, the water in the kettle boils in 6 minutes. When the other coil is switched on, the water boils in 3 minutes. If the two coils are connected in series, the time taken to boil the water in the kettle is

A. km / s

B. $km - s$

C. km / s^2

D. $km - s^2$

Answer: C



Watch Video Solution

120. The dimensional formula of pressure is

A. $[MLT^{-2}]$

B. $[ML^{-1}T^2]$

C. $[ML^{-1}T^{-2}]$

D. $[MLT^{-2}]$

Answer: C



Watch Video Solution

121. According to Newton, the viscous force acting between liquid layers of area A and velocity gradient $\frac{\Delta v}{\Delta z}$ is given by $F = -\eta A \frac{dv}{dz}$, where η is constant called

A. $[ML^2T^{-2}]$

B. $[ML^{-1}T^2A^{-2}]$

C. $[ML^2L^{-2}]$

D. $[ML^1T^{-1}]$

Answer: D



Watch Video Solution

122. The dimensional formula for permeability of free space, μ_0 is

A. $[MLT^{-2}A^{-2}]$

B. $[ML^{-2}T^{-1}A^{-1}]$

C. $[ML^{-1}T^2A^{-2}]$

D. $[ML^{-2}A^{-1}]$

Answer: A



Watch Video Solution

123. Turpentine oil is flowing through a tube of length L and radius r . The pressure difference between the two ends of the tube is p , the viscosity of the oil is given by $\eta = \frac{p(r^2 - x^2)}{4vL}$, where v is the velocity of oil at a distance x from the axis of the tube. From this relation, the dimensions of viscosity η are

- A. $[M^0L^0T^0]$
- B. $[MLT^{-1}]$
- C. $[ML^2T^{-2}]$
- D. $[ML^{-1}T^{-1}]$

Answer: D



Watch Video Solution

124. Which of the following will have the dimensions of time ?

A. LC

B. $\frac{R}{L}$

C. $\frac{L}{R}$

D. $\frac{C}{L}$

Answer: C

 [Watch Video Solution](#)

125. The dimensional formula for magnetic flux is

A. $[ML^2T^{-2}A^{-1}]$

B. $[ML^3T^{-2}A^{-2}]$

C. $[M^0L^{-2}T^2A^{-2}]$

D. $[ML^2T^{-1}A^2]$

Answer: A

 [Watch Video Solution](#)

126. The velocity v of a particle at time t is given by $v = at + \frac{b}{t + c}$, where a, b and c are constants. The dimensions of a, b and c are, respectively.

A. LT^2, L and T

B. L^2, T and LT^2

C. LT^2, LT and L

D. L, LT and T^2

Answer: A



Watch Video Solution

127. The dimensions of $\frac{1}{2}\epsilon_0 E^2$, where ϵ_0 is permittivity of free space and E is electric field, are

A. $[ML^2T^{-2}]$

B. $[ML^{-1}T^{-2}]$

C. $[ML^2L^{-1}]$

D. $[MLT^{-1}]$

Answer: B



Watch Video Solution

128. A student measures the distance traversed in free fall of a body, initially at rest in a given time. He uses this data to estimate g , the acceleration due to gravity. If the maximum percentage errors in measurement of the distance and the time are e_1 and e_2 respectively, the percentage error in the estimation of g is -

A. $e_1 + 2e_2$

B. $e_1 + e_2$

C. $e_1 - 2e_2$

D. $e_2 - e_1$

Answer: A



Watch Video Solution

129. The dimensions of $(\mu_0 \epsilon_0)^{-1/2}$ are

A. $[L^{-1}T]$

B. $[LT^{-1}]$

C. $[L^{\frac{1}{2}}T^{-\frac{1}{2}}]$

D. $[L^{\frac{1}{2}}T^{-\frac{1}{2}}]$

Answer: B



Watch Video Solution

130. The damping force on a oscillator is directly proportional to the velocity. The Unit of the constant of proportionality are

A. Kgs^{-1}

B. Kgs

C. $Kgms^{-1}$

D. $Kgms^{-2}$

Answer: A



Watch Video Solution

131. A standard unit should be

(a) consistent

(b) reproducible

(c) invariable

(d) easily available for usage

A. Only a & b are true

B. Only a & c are true

C. only a, c & d are true

D. a, b , c d are true

Answer: D



[Watch Video Solution](#)

132. The correct order in which the ratio of SI unit to CGS unit increases is

(a) Power (b) Surface tension

(c) Pressure (d) force

A. c,b,d,a

B. c,a,b,d

C. d,a,b,c

D. a,c,d,b

Answer: A



[Watch Video Solution](#)

133. Write the ascending order of the units of length given below .

- (a) Fermi (b) Micron
(c) Angstrom (d) Nanometre

A. a,b,d,c

B. a,c,d,b

C. a,c,b,d

D. a,b,c,d

Answer: B



[Watch Video Solution](#)

134. Out of the following the correct order of dimensions of mass increases is

- (A) Velocity (B) Power
(C) Gravitational Constant

A. A, B , C

B. C, A, B

C. A, C, B

D. B, C, A

Answer: B



[Watch Video Solution](#)

135. The correct order in which the dimensions of time decreases in the following physical quantities

A) Power

B) Modulus of elasticity

C) Moment of inertia

D) Angular momentum

A. A,B,C,D

B. C,D,A, B

C. A,C,D,B

D. C,D,B,A

Answer: D

 [Watch Video Solution](#)

136. The time period of a seconds pendulum is measured repeatedly for three times by two stop watches A, B . If the readings are as follows

(S.NO., A, B) (1, 2.01sec, 2.56sec), (2, 2.10sec, 2.55sec), (3, 1.98sec, 2.57sec)

A. A is more accurate but B is more precise

B. B is more accurate but A is more precise

C. A,B are equally precise

D. A, B are equally accurate.

Answer: A

 [Watch Video Solution](#)

137. (A) All zeros to the right of the last nonzero digit after the decimal point are significant.

(B) If the number is less than one, all the zeros to the right of the decimal point but to the left of the first nonzero digit are not significant.

A. Only A is correct

B. A, B are correct

C. Only B is correct

D. A, B are wrong

Answer: B



[Watch Video Solution](#)

138. If the immediate insignificant digit to be dropped is 5 then there will be two different cases

(A) If the preceding digit is even, it is to be unchanged and 5 is dropped.

(B) If the preceding digit is odd, it is to be raised by 1,

A. Only A is correct

B. A, B are correct

C. Only B is correct

D. A, B are wrong

Answer: B

 [Watch Video Solution](#)

139. How many significant figures are there in the measured values.

A. Only A is correct

B. A, B are correct

C. Only B is correct

D. A, B are wrong

Answer: B

 [Watch Video Solution](#)

140. The correct order in which the dimensions of 'Length' increases in the following physical quantities is

- A) Permittivity
- B) Resistance
- C) Magnetic permeability
- D) Stress

A. A, B, C, D

B. D, C, B, A

C. A, D, C, B

D. C, B, D, A

Answer: C



Watch Video Solution

141. Dimensional formulae are used

A) to convert one system of units into another

(B) to find proportionality constants

C) to check the correctness of an equation

A. Only a & b are true

B. Only C is true

C. A & C are true

D. All the true

Answer: C



Watch Video Solution

142. (A) The correctness of an equation is verified using the principle of homogeneity

(B) All unit less quantities are dimensional less.

A. Both A & B are true

B. Both A & B are false

C. Only A is true

D. Only B is true

Answer: A



Watch Video Solution

143. Which of the following is not a unit of time

A) par - sec

B) light - year

C) micron

D) sec

A. Only A

B. A and B

C. A, B & C

D. A, B , C , D

Answer: C

 [Watch Video Solution](#)

144. For a body in a uniformly accelerated motion, the distance of the body from a reference point at time 't' is given by $x = at + bt^2 + c$, where a, b, c are constants. The dimensions of 'c' are the same as those of

(A) x (B) at (C) bt^2 (D) a^2/b

A. A

B. A & B

C. A, B & C

D. A, B, C & D

Answer: D

 [Watch Video Solution](#)

145. Three of the quantities defined below has the same dimensional formula. Identify the

i) $\sqrt{\text{Energy/mass}}$

ii) $\sqrt{\text{Pressure/density}}$

iii) $\sqrt{\text{force/linear density}}$

iv) $\sqrt{\text{Angular frequency/radius}}$

A. ii only

B. ii and iii only

C. iii only

D. i, ii and iii only

Answer: D



Watch Video Solution

146. If e , E_0 , h and C respectively represents electronic charge, permittivity of free space, planks constant and speed of light then $\frac{e^2}{E_0 h C}$

has the dimensions of

- A) angle B) relative density
C) strain D) current

A. A ,B

B. D

C. A, B, C

D. A, B, C , D

Answer: C



[Watch Video Solution](#)

147. Photon is quantum of radiation with energy $E=h\nu$, where ν is frequency and h is Planck's constant. The dimensions of h are the same as that of

A. Only A

B. B and D

C. A,B, C ,D

D. A and D

Answer: B



[Watch Video Solution](#)

148. If Planck's constant (h) and speed of light in vacuum (c) are taken as two fundamental quantities, which one of the following can, in addition, be taken to express length, mass and time in terms of the three chosen fundamental quantities?

A. C only

B. A and C only

C. A and D only

D. A, B and D only

Answer: D



[Watch Video Solution](#)

149. Name of units of some physical quantities are given in List - 1 and their dimensional formulae are given in List - 2 , Match correct pair in lists.

List - 1

List - 2

(a) *pascal*

(e) $L^2T^{-2}K^{-1}$

(b) NmK^{-1}

(f) $MLT^{-3}K^{-1}$

(c) $JKg^{-1}K^{-1}$

(g) $ML^{-1}T^{-2}$

(d) $Wm^{-1}K^{-1}$

(h) $ML^2T^{-2}K^{-1}$

A. $a - h, b - g, c - e, d - f$

B. $a - g, b - f, c - h, d - e$

C. $a - g, b - e, c - h, d - f$

D. $a - g, b - h, c - e, d - f$

Answer: C



Watch Video Solution

150. Match the following :

List - 1

List - 2

(a) second

(e) carbon - 12

(b) mole

(f) Platinum iridium

(c) Metre

(g) Cs - 133

(d) Kilogram

(h) Kr - 86

A. $a - e, b - g, c - h, d - f$

B. $a - f, b - h, c - g, d - e$

C. $a - e, b - f, c - h, d - g$

D. $a - g, b - e, c - h, d - f$

Answer: D



Watch Video Solution

151. Name of units of some physical quantities are given in List - 1 and their dimensional formulae are given in List - 2 , Match correct pair in

lists.

List - 1

List - 2

(a) *pascal*

(e) $L^2T^{-2}K^{-1}$

(b) NmK^{-1}

(f) $MLT^{-3}K^{-1}$

(c) $JKg^{-1}K^{-1}$

(g) $ML^{-1}T^{-2}$

(d) $Wm^{-1}K^{-1}$

(h) $ML^2T^{-2}K^{-1}$

A. $a - h, b - g, c - e, d - f$

B. $a - g, b - f, c - h, d - e$

C. $a - g, b - e, c - h, d - f$

D. $a - g, b - h, c - e, d - f$

Answer: D



Watch Video Solution

152. Match List I with List II and select the correct answer using the codes given below the lists:

List I

P. Boltzmann constant

Q. Coefficient of viscosity

R. Planck constant

S. Thermal conductivity

List II

1. $[ML^2T^{-1}]$

2. $[ML^{-1}T^{-1}]$

3. $[MLT^{-3}K^{-1}]$

4. $[ML^2T^{-2}K^{-1}]$

A. A - III, B - I, C - II, D - IV

B. A - III, B - II, C - I, D - IV

C. A - IV, B - II, C - I, D - III

D. A - IV, B - I, C - II, C - III

Answer: C



Watch Video Solution

153. Dimensional formula formula for thermal conductivity is (here K denotes the temperature) :

A. $L^2T^{-2}K^{-1}$

B. L^2T^2

C. $ML^2T^{-1}K^{-1}$

D. $MLT^{-3}K^{-1}$

Answer: D



Watch Video Solution

154. Force is given by the expression $F = A \cos (Bx) + C \cos (Dt)$, where x is displacement and t is time. The dimension of $\frac{D}{B}$ is same as that of

A. velocity

B. velocity gradient

C. Angular velocity

D. Angular momentum

Answer: A



Watch Video Solution

155. In the following 'I' refers to current and other symbols have their usual meaning choose the option that corresponds to the dimensions of electrical conductivity.

A. $M^{-1}L^{-3}T^{-3}I$

B. $M^{-1}L^{-3}T^3I^2$

C. $M^{-1}L^{-3}T^3I$

D. $ML^{-3}T^{-3}I^2$

Answer: B



[Watch Video Solution](#)

156. If you look out of the window of a fast moving train the nearby trees, houses etc., seem to move rapidly in a direction opposite to the train's motion, but the distant objects seem to be stationary. Why?

A. Both (A) and (R) are true and (R) is the correct explanation of (A)

B. Both (A) and (R) are true and (R) is not the correct explanation of

(A)

C. (A) is true but (R) is false

D. (A) is false but (r) is true

Answer: A



Watch Video Solution

EXERCISE - II

1. The density of mercury is 13.6gcm^{-3} in CGS system. Its density in SI system is :

A. $136\text{kg}/\text{m}^3$

B. $1360\text{kg}/\text{m}^3$

C. $13600\text{kg}/\text{m}^3$

D. $1.36\text{kg}/\text{m}^3$

Answer: C



Watch Video Solution

2. A force of 40N acts on a body. If the units of mass and length are doubled and the unit of time is tripled, then the force in the new system becomes

A. 90 N

B. 90 new units

C. $\frac{160}{9}$ new units

D. $\frac{160}{9}$ N

Answer: B



Watch Video Solution

3. If the unit of force were 10N, that of power were 1 MW and that of time were 1 millisecond then the unit of length would be

A. $1m$

B. $100m$

C. 10^3m

D. $10^{-2}m$

Answer: B



[Watch Video Solution](#)

4. If the unit of power is million erg/minute, the unit of force is 1000 dyne and the unit of length is $\frac{5}{3}$ cm then the unit of time is (in second).

A. 10

B. 1

C. $1/10$

Answer: C



Watch Video Solution

5. If the unit of length is doubled, unit of time is halved and unit of force is quadrupled, the unit of power would change by the factor

A. $1/4$

B. 16

C. $\frac{1}{16}$

D. 8

Answer: B



Watch Video Solution

6. The density of a material in CGS system is $2g/cm^3$. In a system of units in which unit of length is 2 cm and unit of mass is 4 g what is the numerical value of the density of the material?

A. 4

B. 2

C. 1

D. 0.5

Answer: A



[Watch Video Solution](#)

7. In *CGS* system the magnitude of the force is 100 dynes. In another system where the fundamental physical quantities are kilogram , meter , and minute, find the magnitude of the force.

A. 0.036

B. 0.36

C. 3.6

D. 36

Answer: C



Watch Video Solution

8. The volume V of a liquid crossing through a tube is related to the area of cross-section A , velocity v and time t as $V \propto A^a v^b t^c$ which of the following is correct (given $a \neq 1$)

A. $a \neq b \neq c$

B. $a = b = c$

C. $a \neq b = c$

D. $a = b \neq c$

Answer: C



[Watch Video Solution](#)

9. The critical velocity v of a body depends on the coefficient of viscosity η the density d and radius of the drop r . If K is a dimensionless constant then v is equal to

A. $\frac{K\eta d}{r}$

B. $\frac{Kd}{\eta r}$

C. $\frac{K\eta}{dr}$

D. $\frac{Kr}{\eta r}$

Answer: C



[Watch Video Solution](#)

10. If velocity, force and acceleration are taken as fundamental quantities instead of mass, length and time then find the dimension of Young's modulus.

A. $1/6$ in F

B. $-1/6$ in F

C. $-2/3$ in F

D. All the above are true

Answer: A



Watch Video Solution

11. The critical angular velocity w of a cylinder inside another cylinder containing a liquid at which its turbulence occurs depends on viscosity η , density d and the distance x between the walls of the cylinders. Then w is proportional to

A. $(\eta)/(x^2d)$

B. $\frac{\eta}{d^2x}$

C. $\frac{\eta^2}{xd}$

D. $\frac{xd}{\eta}$

Answer: A



Watch Video Solution

12. A liquid drop of density ρ , radius r , and surface tension σ oscillates with time period T . Which of the following expressions for T^2 is correct?

A. $\rho r^2 / \sigma$

B. $\rho \sigma / r^3$

C. $r^3 \sigma / \rho$

D. None

Answer: A



Watch Video Solution

13. The volume of a liquid (V) flowing per second through a cylindrical tube depends upon the pressure gradient (p/l) radius of the tube (r)

coefficient of viscosity (η) of the liquid by dimensional method the correct formula is

A. $V \propto \frac{Pr^4}{\eta l}$

B. $V \propto \frac{Pr}{\eta l^4}$

C. $V \propto \frac{Pl^4}{\eta r}$

D. None

Answer: A



Watch Video Solution

14. The characteristic distance at which quantum gravitational effect are significant the planck length can be determined form a suitable combination of the fundamental physical constant G h and c which of the followng correctly gives the planck length ?

A. Gh^2c^3

B. G^2hc

C. $\frac{1}{G^2hc}$

D. $\left(\frac{Gh}{c^3}\right)^{1/2}$

Answer: D



Watch Video Solution

15. The dimensions of resistivity in terms of M, L, T and Q, where Q stands for the dimensions of charge is

A. $ML^3T^{-1}Q^{-2}$

B. $ML^3T^{-2}Q^{-1}$

C. $ML^2T^{-1}Q^{-1}$

D. $MLT^{-1}Q^{-1}$

Answer: A



Watch Video Solution

16. The distance travelled by a particle in n^{th} second is

$$S_n = u + \frac{a}{2}(2n - 1)$$
 where u is the velocity and a is the acceleration.

The equation is

- A. dimensionally true
- B. dimensionally false
- C. numerically may be true or false
- D. 1 and 3 are correct

Answer: D



[Watch Video Solution](#)

17. The position of a particle at time t is given by the equation

$$x(t) = \frac{V_0}{A}(1 - e^{-At})$$

$V_0 = \text{constant}$ and $A > 0$

Dimensions of V_0 and A respectively are

- A. M^0LT^0 and T^{-1}

B. M^0LT^{-1} and LT^{-2}

C. M^0LT^{-1} and T

D. M^0LT^{-1} and T^{-1}

Answer: D



[Watch Video Solution](#)

18. If J is the angular momentum and E is the kinetic energy, then $\frac{J^2}{E}$ has the dimensions of

A. Moment of Inertia

B. Power

C. Angular velocity

D. Impulse

Answer: A



[Watch Video Solution](#)

19. If L is the inductance, C is the capacitance and R is the resistance, then

$R\sqrt{\frac{C}{L}}$ has the dimension

A. MLT^2I^{-2}

B. ML^2T^2I

C. $ML^{-1}T^{-2}I^{-1}$

D. $M^0L^0T^0I^0$

Answer: D



[Watch Video Solution](#)

20. If h is Planck's constant and λ is the wave length, $\frac{h}{\lambda}$ has the dimensions of

A. Energy

B. Momentum

C. Moment of Inertia

D. Frequency

Answer: B



Watch Video Solution

21. Which of the following combinations of three different physical quantities P, Q, R can never be a meaningful quantity?

A. $PQ - R$

B. $\frac{PQ}{R}$

C. $\frac{P - Q}{r}$

D. $\frac{PR - Q^2}{QR}$

Answer: C



Watch Video Solution

22. Which of the following is wheat fruit?

- A. Power
- B. energy
- C. Torsional constant
- D. Force

Answer: C

 [Watch Video Solution](#)

23. A quantity X is given by $\epsilon_0 L \frac{\Delta V}{\Delta t}$ where ϵ_0 is the permittivity of the free space, L is a length ΔV is a potential difference and Δt is a time interval. The dimensional formula for X is the same as that of

- A. Resistance
- B. electric charge
- C. voltage

D. electric current

Answer: D



[Watch Video Solution](#)

24. The radius of a sphere is measured as $(10 \pm 0.02 \%)$ cm. The error in the measurement of its volume is

- A. 25.1 cc
- B. 25.12 cc
- C. 2.51 cc
- D. 251.2 cc

Answer: C



[Watch Video Solution](#)

25. If length and breadth of a plane are (40 ± 0.2) and (30 ± 0.1) cm, the absolute error in measurement of area is

A. 10cm^2

B. 8cm^2

C. 9cm^2

D. 7cm^2

Answer: A



[Watch Video Solution](#)

26. When 10 observation are taken the random error is x when 100 observation are taken the random error becomes

A. $x / 10$

B. x^2

C. $10x$

D. \sqrt{x}

Answer: A



Watch Video Solution

27. The diameter of a wire as measured by a screw gauge was found to be 1.002 cm, 1.000 cm, 1.006 cm. The absolute error in the second reading is

A. 0.002 cm

B. 0.004 cm

C. 0.006 cm

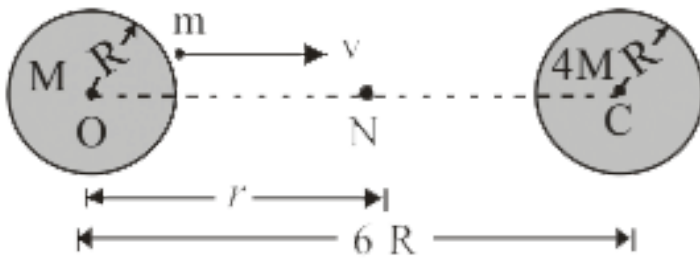
D. 0.003 cm

Answer: D



Watch Video Solution

28. Two uniform solid spheres of equal radii R , but mass M and $4M$ have a centre to centre separation $6R$, as shown in figure. The two spheres are held fixed. A projectile of mass m is projected from the surface of the sphere of mass M directly towards the centre of the second sphere. Obtain an expression for the minimum speed v of the projectile so that it reaches the surface of the second sphere.



- A. 0.11
- B. 0.08
- C. 0.05
- D. 0.01

Answer: B

[Watch Video Solution](#)

29. The error in the measurement of the length of a simple pendulum is 0.1% and the error in the time period is 2%. What is the possible percentage of error in the physical quantity having the dimensional formula LT^{-2} ?

A. 1.1%

B. 2.1%

C. 4.1%

D. 6.1%

Answer: C



[Watch Video Solution](#)

30. The length and breadth of a rectangular are 25 cm and 10 cm respectively and were measured to an accuracy of 0.1 cm. The percentage error in area is

A. 2.8 %

B. 0.5 %

C. 1.4 %

D. 3 %

Answer: C



Watch Video Solution

31. If the length of a cylinder is measured to be 4.28 cm with an error of 0.01 cm. The percentage error in the measured length is nearly

A. 0.4 %

B. 0.5 %

C. 0.2 %

D. 0.1 %

Answer: C

 [Watch Video Solution](#)

32. The side of a cube, as measured with a vernier calipers of least count 0.01 cm is 3.00 cm. The maximum possible error in the measurement of volume is

A. $\pm 0.01\text{cm}^3$

B. $\pm 0.06\text{cm}^3$

C. $\pm 0.0\text{cm}^3$

D. $\pm 0.27\text{cm}^3$

Answer: D

 [Watch Video Solution](#)

33. If $L = (20 \pm 0.01)\text{m}$ and $B = (10 \pm 0.02)\text{m}$ then L/B is

A. $(2 \pm 0.03)\text{m}$

B. $(2 \pm 0.015)m$

C. $(2 \pm 0.01)m$

D. $(2 \pm 0.005)m$

Answer: D

 [Watch Video Solution](#)

34. The volume of a sphere is $1.76m^3$ What will be the volume of 25 such spheres taking into account the significant figures.

A. $0.44 \times 10^2 cm^3$

B. $44.0cm^3$

C. $44cm^3$

D. $44.00cm^3$

Answer: B

 [Watch Video Solution](#)

35. A body of mass $m = 3.513 \text{ kg}$ is moving along the x-axis with a speed of 5.00 m s^{-1} . The magnitude of its momentum is recorded as

A. 17.6 kg m s^{-1}

B. $17.565 \text{ kg m s}^{-1}$

C. $17.56 \text{ kg m s}^{-1}$

D. $17.57 \text{ kg m s}^{-1}$

Answer: A



Watch Video Solution

36. If $x = \frac{a}{b}$, then the maximum percentage error in the measurement of

'x' will be

A. $\frac{\Delta a}{a} / \frac{\Delta b}{b} \times 100 \%$

B. $\frac{\Delta a}{a} \times \frac{\Delta b}{b} \times 100 \%$

$$\text{C. } \left[\frac{\Delta a}{a} + \frac{\Delta b}{b} \right] \times 100 \%$$

$$\text{D. } \left[\frac{\Delta a}{a} - \frac{\Delta b}{b} \right] \times 100 \%$$

Answer: C



Watch Video Solution

37. Two full turns of the circular scale of a screw gauge cover a distance of 1 mm on its main scale. The total number of division on the circular scale is 50. Further, it is found that the screw gauge has a zero error of -0.03 mm while measuring the diameter of a thin wire, a student notes the main scale reading of 3 mm and the number of circular scale division in line with the main scale as 35. The diameter of the wire is

A. 3.32mm

B. 3.73mm

C. 3.67mm

D. 3.38mm

Answer: D



[Watch Video Solution](#)

38. In a vernier callipers, n divisions of its main scale match with $(n+1)$ divisions on its vernier scale. Each division of the main scale is a units. Using the vernier principle, calculate its least count.

A. $d / (m - 1)$

B. $d / (m + 1)$

C. d / m

D. $md / (m + 1)$

Answer: B



[Watch Video Solution](#)

39. A Vernier callipers has 1mm marks on the main scale . It has 20 equal divisions on the vernier scale , which match with 16 main scale divisions .

For this vernier callipers, the least count is

A. 0.02 mm

B. 0.05 mm

C. 0.1 s mm

D. 0.2 mm

Answer: D



[Watch Video Solution](#)

40. A screw gauge gives the following reading when used to measure the diameter of a wire.

Main scale reading : 0mm

Circular scale reading : 52 divisions

Given that 1mm on main scale corresponds to 100 divisions of the circular scale. the diameter of wire from the above data is :

- A. 0.52 cm
- B. 0.052 cm
- C. 0.026 cm
- D. 0.005 cm

Answer: B



[Watch Video Solution](#)

41. The vernier scale of a travelling microscope has 50 divisions which coincide with 49 main scale divisions. If each main scale division is 0.5 mm, then the least count of the microscope is

- A. 0.01 mm
- B. 0.1 mm
- C. 0.001 mm

D. 1 cm

Answer: A



[Watch Video Solution](#)

42. Time for 20 oscillations of a pendulum is measured as $t_1 = 39.6$ s, $t_2 = 39.9$ s and $t_3 = 39.5$ s. What is the precision in the measurements?

What is the accuracy of the measurement?

A. 0.1 sec

B. 0.01 sec

C. 1 sec

D. 2 sec

Answer: A



[Watch Video Solution](#)

43. The measured mass the volume of a body are 2.42 and 4.7 cm^3 respectively with possible errors 0.01 g , and 0.1 cc. The find the maximum error in density.

A. 0.2 %

B. 2 %

C. 5 %

D. 10 %

Answer: B



[Watch Video Solution](#)

44. A Vernier callipers has 1mm marks on the main scale . It has 20 equal divisions on the vernier scale , which match with 16 main scale divisions .

For this vernier callipers, the least count is

A. 0.02mm

B. $0.05mm$

C. $0.1mm$

D. $0.2mm$

Answer: D



[Watch Video Solution](#)

45. The relative error in the determination of the surface area of a sphere is α . Then the relative error in the determination of its volume is :

A. $\frac{3}{2}\alpha$

B. $\frac{2}{3}\alpha$

C. $\frac{5}{2}\alpha$

D. α

Answer: A



[Watch Video Solution](#)

46. A student measures the time period of 100 oscillations of a simple pendulum four times. The data set is 90 s, 91 s, 95 s, and 92 s. If the minimum division in the measuring clock is 1s, then the reported mean time should be:

A. $92 \pm 3s$

B. $92 \pm 2s$

C. $92 \pm 5.0s$

D. $92 \pm 1.8s$

Answer: B



[Watch Video Solution](#)

47. A force F is applied on a square plate of side L . If the percentage error in the determination of L is 2% and that in F is 4%. What is the permissible error in pressure?

A. 0.13

B. 0.1

C. 0.07

D. 0.12

Answer: B

 [Watch Video Solution](#)

48. Which of the following numbers has least number of significant figures?

A. 0.80760

B. 0.80200

C. 0.08076

D. 80.267

Answer: C

 [Watch Video Solution](#)

49. The number of significant figures in 0.0006032 is

A. 7

B. 4

C. 5

D. 2

Answer: B

 [Watch Video Solution](#)

50. State the number of significant figures in the $6.320J$

A. 4

B. 2

C. 3

D. 1

Answer: A



Watch Video Solution

51. The radius of a circle is 2.12 metre. Its area according to the rule of significant figures is

A. 4.5126cm^2

B. 4.521cm^2

C. 4.52cm^2

D. 4.5cm^2

Answer: D



Watch Video Solution

52. The number of significant figures in the numbers 4.8000×10^4 and 48000.50 are respectively

- A. 5 and 6
- B. 5 and 7
- C. 2 and 7
- D. 2 and 6

Answer: B



[Watch Video Solution](#)

53. The mass of a block is 87.2 g and its volume is 25cm^3 . What is its density up to correct significant figures?

- A. 3.488gcm^{-3}
- B. 3.5gcm^{-3}
- C. 3.48gcm^{-3}

D. 3.4gcm^{-3}

Answer: B



[Watch Video Solution](#)

54. The length of a rod is measured by different instruments. Of the following the accurate result is

A. 500 mm

B. 500.00 mm

C. 500.0 mm

D. 0.5 m

Answer: B



[Watch Video Solution](#)

55. 2.34 is obtained by rounding of the number

A. 2.346

B. 2.355

C. 2.335

D. 2.334

Answer: C



Watch Video Solution

56. When 0.0003125 is reduced to 3 significant figures its value is

A. 0.00312

B. 3.125

C. 0.000312

D. 0.000313

Answer: C



[Watch Video Solution](#)

57. Find the value of $2.2 + 4.08 + 3.125 + 6.3755$.

- A. 15.78 cm
- B. 15.7805 cm
- C. 15.780 cm
- D. 15.8 cm

Answer: D



[Watch Video Solution](#)

58. $9765 \div 14.39 = 678.59625$. This quotient on rounding off to two significant figures is

A. 680

B. 70

C. 678.6

D. 679

Answer: A



[Watch Video Solution](#)

59. The value of $124.2 - 52.487$ with due regard to significant places is

A. 71.7

B. 71.71

C. 72

D. 71

Answer: A



[Watch Video Solution](#)

60. The value of 42×0.041 with due regard to significant figures is

A. 1.722

B. 1.72

C. 1.7

D. 1.8

Answer: C



[Watch Video Solution](#)

61. $\sqrt{58.97} =$

A. 7.679

B. 7.68

C. 7.6

D. 7.7

Answer: A



[Watch Video Solution](#)

PRACTICE EXERCISE

1. The ratio of $S. I$ unit of the C.G.S unit of gravitational constant 'G' is-

A. 10^3

B. 10^{-3}

C. 10^6

D. 10^{-5}

Answer: A



[Watch Video Solution](#)

2. If units in two systems of measurements are in the ratio 2 : 3, the ratio of the units of angular momentum in those two systems in

A. 2 : 3

B. 9 : 4

C. 1 : 1

D. 4 : 9

Answer: D



[Watch Video Solution](#)

3. If the unit of length is 4 m and that of velocity is $6ms^{-1}$, the unit of time is (in second)

A. $2/3$

B. $4/3$

C. $3/2$

D. 24

Answer: A



Watch Video Solution

4. If the unit of force is 1N, the unit of work done is 10 J and the unit of time is 1 second, the unit of mass is

A. 10 kg

B. 1 kg

C. 0.1 kg

D. 100 kg

Answer: C



Watch Video Solution

5. If the unit of length, mass and time each be doubled, the unit of work is increased by

- A. 5 times
- B. 2 times
- C. 3 times
- D. 4 times

Answer: B



[Watch Video Solution](#)

6. A new unit of length is chosen such that the speed of light in vacuum is unity. What is the distance between the sun and the Earth in terms of the new unit if light takes 8 min and 20 s to cover this distance?

- A. 50
- B. 100

C. 5

D. 0.5

Answer: B



[Watch Video Solution](#)

7. In planetary motion the areal velocity of position vector of a planet depends on angular velocity (ω) and the distance of the planet from sun (r). If so the correct relation for areal velocity is

A. $\frac{dA}{dt} \propto \omega r$

B. $\frac{dA}{dt} \propto \omega^2 r$

C. $\frac{dA}{dt} \propto \omega r^2$

D. $\frac{dA}{dt} \propto \sqrt{\omega r}$

Answer: C



[Watch Video Solution](#)

8. If pressure P , velocity V and Time T are taken as fundamental physical quantities the dimensional formula of the force is

A. PV^2T^2

B. $P^{-1}V^2T^{-2}$

C. PVT^{-2}

D. $P^{-1}VT^{-2}$

Answer: A



[Watch Video Solution](#)

9. The reverberation period T of a room on its volume V , its surface area A and velocity of sound C . If K is dimensions constant, then $T =$

A. $\frac{KV}{CA}$

B. $\sqrt{\frac{KV}{CA}}$

C. $\frac{KV}{C\sqrt{A}}$

D. $\frac{K}{C}\sqrt{VA}$

Answer: A



[Watch Video Solution](#)

10. If the vibration frequency of atoms in a crystal depends on the atomic mass m , the atomic spacing r and compressibility C , then it is proportional to

A. $m^{\frac{1}{2}}$

B. $r^{\frac{1}{2}}$

C. C

D. all the above

Answer: B



[Watch Video Solution](#)

11. The time period of a soap bubble is T which depends on pressure p , density d and surface tension s then the relation for T is

A. $T \propto p d s$

B. $T \propto p^{-3/2} d^{1/2} s$

C. $T \propto p d^{-2} s^{3/2}$

D. $T \propto p d^2 s^{1/3}$

Answer: B



[Watch Video Solution](#)

12. The method of dimensional analysis can be used to derive which of the following relations ?

A. $A \sin(\omega t - kx)$

B. $N_0 e^{-\lambda t}$

C. $b \log\left(\frac{a}{\lambda}\right)$

D. $F = 6\pi\eta r v$

Answer: D



[Watch Video Solution](#)

13. If the velocity is represented by V , force by F and work by W . These quantities are taken as fundamental quantities then the correct dimensions of mass will be

A. W / V^2

B. W / V

C. F / V^2

D. V / W

Answer: A



[Watch Video Solution](#)

14. If C the velocity of light, h planck's constant and G Gravitational constant are taken as fundamental quantities, then the dimensional formula of mass is

A. $h^{-1/2}G^{1/2}C^0$

B. $h^{1/2}C^{1/2}G^{-1/2}$

C. $h^{-1/2}C^{1/2}G^{-1/2}$

D. $h^{-1/2}C^{-1/2}G^{-1/2}$

Answer: B

 [Watch Video Solution](#)

15. If m is the mass of drop of a liquid of radius ' r ' then $\frac{mg}{\pi r}$ has the same dimensions of :

A. surface tension

B. tension

C. Young's modulus

D. coefficient of viscosity

Answer: A



[Watch Video Solution](#)

16. The dimensionally correct formula is

A. $S = u + \frac{1}{2}at^2$

B. $S = ut + \frac{1}{2}at^3$

C. $S = ut - at^2$

D. None of the above

Answer: C



[Watch Video Solution](#)

17. The expression $S = \frac{a}{b}(1 - e^{-bt})$ is dimensionally true. The dimensional formula of a and b are respectively, (if S is the displacement at any instant t .)

A. L, T and T

B. $L^{-1}T$ and T^{-1}

C. LT^{-1} and T^{-1}

D. LT^{-1} and T

Answer: C



Watch Video Solution

18. According to Bernoulli's theorem $\frac{p}{\rho} + \frac{v^2}{2} + gh = \text{constant}$, dimensional formula of the constant.

A. $M^0L^0T^0$

B. M^0LT^0

C. $M^0 L^2 T^{-2}$

D. $M^0 L^2 T^{-4}$

Answer: C



[Watch Video Solution](#)

19. If R is the electric resistance and C is the capacitance, the dimensional formula of RC is

A. LT^{-1}

B. T^{-1}

C. MLT^{-2}

D. T

Answer: D



[Watch Video Solution](#)

20. Velocity of sound in a medium is given by $A^{1/2}d^{-1/2}$, where 'd' is density of medium. Then A represents

- A. Elastic constant
- B. Energy
- C. Volume
- D. Compressibility

Answer: A



[Watch Video Solution](#)

21. If 'm' is mass 'Q' is charge and B is magnetic induction, m/BQ has the same dimensions as

- A. Frequency
- B. (Frequency)⁻¹
- C. Velocity

D. Acceleration

Answer: B



[Watch Video Solution](#)

22. The sides of a rectangle are (5.5 ± 0.1) cm and (3.5 ± 0.2) cm . Its perimeter is

A. $(18.0 \pm 0.1)cm$

B. $(18.0 \pm 0.2)cm$

C. $(18.0 \pm 0.3)cm$

D. $(18.0 \pm 0.6)cm$

Answer: D



[Watch Video Solution](#)

23. The length and breadth of a plate are $(6 \pm 0.1)cm$ and $(4 \pm 0.2)cm$ respectively. The area of the plate is

- A. $(24 \pm 1.6)cm^2$
- B. $24.4cm^2$
- C. $23.6cm^2$
- D. $(24 + 0.02)cm^2$

Answer: A



[Watch Video Solution](#)

24. $S = \frac{1}{2}at^2$ where a is a constant. If relative error in measurement of t is y , relative error in measurement of S will be

- A. y^2
- B. \sqrt{y}
- C. $2y$

D. y

Answer: C



[Watch Video Solution](#)

25. Two objects A and B are of lengths 5 cm and 7cm determined with errors 0.1 cm and 0.2 cm respectively. What is the error in determining (a) the total length and (b) the difference in their lengths?

A. 0.1 cm & 0.3 cm

B. 0.3 cm & 0.3 cm

C. 0.3 cm & 0.1 cm

D. 0.4 cm & 0.4 cm

Answer: B



[Watch Video Solution](#)

26. The error in the measurement of length and radius of a cylinder are 1% and 2% respectively. The maximum percentage of error in its volume is

A. 0.03

B. 0.05

C. 0.06

D. 0.1

Answer: B



[Watch Video Solution](#)

27. The error in the measurement of radius of a sphere is 0.4% . The relative error in its volume is

A. 0.0016

B. 0.0012

C. 0.0024

D. 0.012

Answer: D



[Watch Video Solution](#)

28. If $L_1 = 2.02m \pm 0.01m$, $L_2 = 1.02m \pm 0.01m$, determine $L_1 + 2L_2$

A. 4.06 ± 0.02

B. 4.06 ± 0.03

C. 4.06 ± 0.005

D. 4.06 ± 0.01

Answer: B



[Watch Video Solution](#)

29. If the length of a cylinder is measured to be 50 cm with an error of 0.25 cm. The percentage error in the measured length is

- A. 0.4 %
- B. 0.5 %
- C. 0.2 %
- D. 0.1 %

Answer: B



[Watch Video Solution](#)

30. The length of a cylinder is measured as 5 cm using a vernier calipers of least count 0.1 mm. The percentage error is

- A. 0.005
- B. 0.02
- C. 0.2

D. 0.002

Answer: C



Watch Video Solution

31. A body travels uniformly a distance of $(20.0 \pm 0.2)m$ in time $(4.0 \pm 0.04)s$. The velocity of the body is

A. $(5.0 \pm 0.4)ms^{-1}$

B. $(5.0 \pm 0.2)ms^{-1}$

C. $(5.0 \pm 0.6)ms^{-1}$

D. $(5.0 \pm 0.1)ms^{-1}$

Answer: D



Watch Video Solution

32. Time for 20 oscillations of a pendulum is measured as $t_1 = 39.6$ s, $t_2 = 39.9$ s and $t_3 = 39.5$ s. What is the precision in the measurements?

What is the accuracy of the measurement?

A. 39.6 sec

B. 39.9 sec

C. 39.5 sec

D. 39.7 sec

Answer: D



[Watch Video Solution](#)

33. The radius of earth is 6347 km. Its rounded off value up to two significant figures is

A. 6400 km

B. $6.4 \times 10^3 km$

C. $6.3 \times 10^3 km$

D. $6.35 \times 10^3 km$

Answer: A



[Watch Video Solution](#)

34. 3400 has significant figures

A. 4

B. 2

C. 1

D. 3

Answer: B



[Watch Video Solution](#)

35. The number of significant figures in 0.0160 kg is

A. 2

B. 3

C. 4

D. 5

Answer: B



[Watch Video Solution](#)

36. The number of significant figures in an area $2.64 \times 10^{24} m^2$ is

A. 1

B. 2

C. 4

D. 3

Answer: D



Watch Video Solution

37. The distance travelled by a body is 107.25 m in time 1.5 s. The velocity with correct significant figures is

A. 71.5

B. 71

C. 71.5

D. 72.0

Answer: B



Watch Video Solution

38. Less accurate of the four options given below

A. 9.27

B. 41

C. 1.01

D. 9.00×10^0

Answer: B



[Watch Video Solution](#)

39. $9.27 / 41 =$ (consider significant digits)

A. 0.226

B. 0.23

C. 0.2

D. 0.2261

Answer: B



[Watch Video Solution](#)

40. When 57.986 is rounded off to 4 significant figures, then it becomes

A. 58

B. 57.00

C. 57.90

D. 57.99

Answer: D



[Watch Video Solution](#)

41. The value of $44.8 - 21.235$ is

A. 23.565

B. 23.56

C. 23.57

D. 23.6

Answer: D



[Watch Video Solution](#)

42. The length and breadth of a rectangular object are 25.2 cm and 16.8 cm respectively and have been measured to an accuracy of 0.1 cm. Find the relative error and percentage error in the area of the object.

A. 0.01 & 1%

B. 0.02 & 2%

C. 0.03 and 3%

D. 0.04 & 4%

Answer: B



[Watch Video Solution](#)

43. The value of $124.2 - 52.487$ with due regard to significant places is

A. 176.7

B. 176.69

C. 176

D. 177

Answer: A



[Watch Video Solution](#)

44. The value of 117.3×0.0024 with due regard to significant figures is

A. 0.2808

B. 0.281

C. 0.28

D. 0.29

Answer: C

 [Watch Video Solution](#)

45. The value of $(17.5)^2$ is

A. 306

B. 306.25

C. 306.2

D. 306.3

Answer: A

 [Watch Video Solution](#)

PROBLEM

1. From two diametrically opposite points A and B on earth, moon is observed. The angle θ subtended at the moon by the two directions of observation is $1^\circ 54'$. If radius of earth is 0.638×10^7 m, find the distance of the moon from the earth.

 [Watch Video Solution](#)

2. Calculate the angular of (a) 1° (degree) (b) $1'$ (minute of arc or arcmin) and (c) $1''$ (second of arc or arc second) in radians. Use $360^\circ = 2\pi$ rad, $1^\circ = 60'$ and $1' = 60''$

 [Watch Video Solution](#)

3. A man wishes to estimate the distance of a nearby tower from him. He stands at a point A in front of the tower C and spots a very distant object O in line with AC. He then walks perpendicular to AC upto B, a distance of 100m and looks at O and C again. Since O is very distant, the direction of BO is practically the same as AO, but he finds the line of sight of C

shifted from the original line of sight by an angle $\theta = 40^\circ$ (θ is known as parallax). Estimate the distance to the tower C from his original position A.

 [Watch Video Solution](#)

4. If the size of a nucleus (in the range of 10^{-15} to $10^{-14}m$) is scaled up to the tip of a sharp pin, what roughly is the size of an atom? Assume tip of the pin to be in the range $10^{-5}m$ to $10^{-4}m$.

 [Watch Video Solution](#)

5. The length of a straight line is measured a number of times by a number of observers. The following are the results of these measurements. Decide precision and accuracy.

Actual length = $3.785 \text{ cm} \pm 0.001 \text{ cm}$

1st set of measurement 3.8 cm , 3.9 cm , 3.7 cm

2nd set of measurements 3.478 cm , 3.479 cm , 3.478 cm , 3.478 cm , 3.479 cm

3 rd set of measurement 3.55 cm , 3.65 cm , 3.45 cm , 3.45 cm , 3.35 cm 4th

set of measurements 3.784 cm , 3.785 cm , 3.784 cm , 3.785 cm , 3.784 cm

 [Watch Video Solution](#)

6. Two clocks are being tested against a standard clock located in a national laboratory. At 12:00:00 noon by the standard clock, the readings of the two clocks are :

	Clock 1	Clock 2
Monday	12:00:06	10:15:08
Tuesday	12:01:25	10:14:59
Wednesday	11:59:06	10:15:28
Thursday	12:01:50	10:15:07
Friday	11:59:25	10:14:42
Saturday	12:01:40	10:15:14
Sunday	12:01:29	10:15:21

If you are doing an experiment that requires 'precision time interval' measurements , which of the two clocks will you prefer ?

 [Watch Video Solution](#)

7. In an experiment the value of refractive index of glass was found to be 1.54, 1.53, 1.44, 1.54, 1.56 and 1.45 in successive measurements. Calculate (i) the mean value of refractive index (ii) absolute error of each measurement (iii) mean absolute error (iv) relative error and (v) percentage error.

 [Watch Video Solution](#)

8. The readings of a length come out to be 2.63 m, 2.56 m, 2.42 m, 2.71 m and 2.80 m. Calculate the absolute errors and relative errors or percentage errors.

 [Watch Video Solution](#)

9. If $L = 2.06 \text{ cm} \pm 0.02 \text{ cm}$, $B = 1.11 \text{ cm} \pm 0.03 \text{ cm}$. What are $(L+B)$ and $(L-B)$ equal to?

 [Watch Video Solution](#)

10. Two objects A and B are of lengths 5 cm and 7cm determined with errors 0.1 cm and 0.2 cm respectively. What is the error in determining (a) the total length and (b) the difference in their lengths?

 [Watch Video Solution](#)

11. If $L = 2.01 \text{ m} \pm 0.01 \text{ m}$, what is $3L$?

 [Watch Video Solution](#)

12. If $L_1 = 2.02 \text{ m} \pm 0.01 \text{ m}$, $L_2 = 1.02 \text{ m} \pm 0.01 \text{ m}$, determine $L_1 + 2L_2$

 [Watch Video Solution](#)

13. The length and breadth of a rectangular object are 25.2 cm and 16.8 cm respectively and have been measured to an accuracy of 0.1 cm. Find the relative error and percentage error in the area of the object.





[Watch Video Solution](#)

14. In an experiment to determine the value of acceleration due to gravity g using a simple pendulum, the measured value of length of the pendulum is 31.4 cm known to 1 mm accuracy and the time period for 100 oscillations of pendulum is 112.0 s known to 0.01 s accuracy. Find the accuracy in determining the value of g .



[Watch Video Solution](#)

15. If $L = 20.04 \text{ m} \pm 0.01 \text{ m}$, $B = 2.52 \text{ m} \pm 0.02 \text{ m}$. What are the values of $(L \times B)$ and $(L + B)$?



[Watch Video Solution](#)

16. One side of a cube is measured as $a = 4.03 \pm 1\%$. What is its value?



[Watch Video Solution](#)

17. The density of a cube is measured by measuring its mass and the length of its sides. If the maximum errors in the measurement of mass and length are 3% and 2%, respectively, then find the maximum error in the measurement of the density of cube.

 [Watch Video Solution](#)

18. An experiment measured quantity a , b , c and then x is calculated from $x = ab^2 / c^3$. If the percentage error in a , b , c are $\pm 1\%$, $\pm 3\%$ and $\pm 2\%$ respectively, the percentage error in x can be,

 [Watch Video Solution](#)

19. If error in measurement of radius of a sphere is 1%, what will be the error in measurement of volume?

 [Watch Video Solution](#)

20. A rectangular metal slab of mass 33.333 g has its length 8.0 cm, breadth 5.0 cm and thickness 1mm. The mass is measured with accuracy up to 1 mg with a sensitive balance. The length and breadth are measured with a vernier calipers having a least count of 0.01 cm. The thickness is measured with a screwgauge of least count 0.01 mm. Calculate the percentage accuracy in density from above measurements.



[Watch Video Solution](#)

21. The percentage errors in the measurement of mass and speed are 2% and 3% respectively. The error in kinetic energy obtained by measuring mass and speed, will be



[Watch Video Solution](#)

22. The error in the measurement of the length of a simple pendulum is 0.1% and the error in the time period is 2%. What is the possible

percentage of error in the physical quantity having the dimensional formula LT^{-2} ?

 [Watch Video Solution](#)

23. Two resistors of resistances $R_1 = 100 \pm 3$ ohm and $R_2 = 200 \pm 4$ ohm are connected (a) in series , (b) in parrallel. Find the equivalent resistance of the (a) series combination , (b) parallel combination . Use for

(a) the relation $R = R_1 + R_2$ and for (b)

$$\frac{1}{R} = \frac{1}{R_1} + \frac{1}{R_2} \text{ and } \frac{\Delta R'}{R'^2} = \frac{\Delta R_1}{R_1^2} + \frac{\Delta R_2}{R_2^2}$$

 [Watch Video Solution](#)

24. The heat dissipated in a resistance can be obtained by the measurement of resistance, current and time. If the maximum percentage error in the measurement of these quantities are 1% , 2% and 1% respectively. The maximum percentage error in the determination of the dissipated heat is -



[Watch Video Solution](#)

25. The period of oscillation of a simple pendulum is $T = 2\pi\sqrt{\frac{L}{g}}$.

Measured value of L is 20.0 cm known to 1 mm accuracy and time for 100 oscillations of the pendulum is found to be 90 s using wrist watch of 1 s resolution. The accuracy in the determination of g is :



[Watch Video Solution](#)

26. Write down the number of significant figure in the 6.032



[Watch Video Solution](#)

27. 20.96 rounded off to 3 significant figures is



[Watch Video Solution](#)

28. A stick has a length of 12.132 cm and another stick has a length of 12.4 cm.

If the two sticks are placed end to end , what is their total length ?



[Watch Video Solution](#)

29. Find the value of $2.2 + 4.08 + 3.125 + 6.3755$.



[Watch Video Solution](#)

30. Solve with due regard to significant figures.

(i) $46.7 - 10.4 =$ (ii) $(3.0 \times 10^{-8}) + (4.5 \times 10^{-6}) =$



[Watch Video Solution](#)

31. Find the product of 1.2, 2.54 and 3.257 with due regard to significant figures.

 [Watch Video Solution](#)

32. Enthalpy change of a reaction with be equal to

 [Watch Video Solution](#)

33. A substance having mass 5.74 g occupies a volume of 1.2cm^3 .
Caluclate its density with due regard to significant digits.

 [Watch Video Solution](#)

34. Find out the results of the following operations.

(i) 117.3×0.0024 (ii) $9.27 \div 41$

(iii) 42×0.041 (iv) $124.2 + 52.487$

(v) $124.2 - 52.487$ (vi) $\sqrt{58.97}$

(vii) $(17.5)^2$.

 [Watch Video Solution](#)

35. If a circular piece of tin has a measured radius of 2.6 cm . What is circumference ?

 [Watch Video Solution](#)

36. The diameter of a sphere is 4.24 m . Calculate its surface area with due regard to significant figures.

 [Watch Video Solution](#)

37. Each side of a cube is measured to be 7.203 m. what are the total surface area and the volume of the cube to appropriate significant figures ?

 [Watch Video Solution](#)

38. The length and breadth of a rectangular sheet are 16.2 cm and 10.1 cm, respectively. The area of the sheet in appropriate significant figures and error is

 [Watch Video Solution](#)

39. Convert 1 newton (SI unit of force) into dyne (CGS unit of force)

 [Watch Video Solution](#)

40. Convert the unit of work done from MKS system to CGS system (i.e. joule)

 [Watch Video Solution](#)

41. Verify the correctness of the equations $v = u + at$.

 [Watch Video Solution](#)

42. Check the correctness of the formula $S = ut + \frac{1}{3}at^2$ where S is the distance, u is velocity, a is acceleration and t is time.

 [Watch Video Solution](#)

43. Show that the expression of the time period T of a simple pendulum of length l given by $T = 2\pi\sqrt{l/g}$ is dimensionally correct.

 [Watch Video Solution](#)

44. The time period of oscillation of a simple pendulum depends on the following quantities

Length of the pendulum (l),

Mass of the bob (m), and

Acceleration due to gravity (g)

Derive an expression for Using dimensional method.

 [Watch Video Solution](#)

45. A gas bubble from an explosion under water oscillates with a period T proportional to $p^a d^b E^c$ where p is the static pressure d is the density of water and E is the total energy of explosion. Find the value of a, b and c .

 [Watch Video Solution](#)

46. The dimensional formula of product and quotient of two physical quantities A and B are given by

$[AB] = [ML^2T^{-2}]$, $\left[\frac{A}{B}\right] = [MT^{-2}]$. The quantities A and B respectively are

 [Watch Video Solution](#)

47. If the equation of state of a gas is expressed as $\left(P + \frac{a}{V^2}\right)(V - b) = RT$ where P is the pressure, V is the volume and

T the absolute temperature and a, b, R are constants, then find the dimensions of 'a' and 'b' ?

 [Watch Video Solution](#)

48. If E, M, L and G denote energy, mass, angular momentum and gravitational constant respectively, then the quantity $(E^2 L^2 / M^5 G^2)$ has the dimensions of

 [Watch Video Solution](#)

49. If pressure P , velocity V and time T are taken as fundamental physical quantities, the dimensional formula of force is

 [Watch Video Solution](#)

50. If unit of mass is taken as 1 kg, of time a 1 minute and that acceleration due to gravity is taken as $9.81ms^{-2}$. What is the unit of

energy?



[Watch Video Solution](#)

EXERCISE -1 A

1. Atomic clock generally used in the national standards, is based on the periodic vibrations produced in a

- A. cesium atom
- B. carbon atom
- C. hydrogen atom
- D. krypton atom

Answer: A



[Watch Video Solution](#)

2. Atomic clock generally used in the national standards, is based on the periodic vibrations produced in a

A. $\pm 1 \times 10^{-13} \text{ s}$

B. $\pm 1 \times 10^{13} \text{ s}$

C. $\pm 1 \times 10^{-31} \text{ s}$

D. $\pm 1 \times 10^{-35} \text{ s}$

Answer: A



Watch Video Solution

3. Which one of the following methods is used to measure distance of a planet or a star from the earth?

A. the parallel method

B. the least count method

C. the null method

D. the parallax method

Answer: D



[Watch Video Solution](#)

4. Pascal is the S.I. unit of

A. Impulse

B. Coefficient of Viscosity

C. Surface Tension

D. Modulus of elasticity

Answer: D



[Watch Video Solution](#)

5. SI unit of coefficient of thermal conductivity

A. $Wm^{-1}K^{-1}$

B. $Wm^{-2}K^{-1}$

C. $Wm K^{-1}$

D. $Wm^{-1}K^{-2}$

Answer: A



[Watch Video Solution](#)

6. In the following which is not the unit of time

A. Leap year

B. Lunar month

C. Light year

D. sidereal year

Answer: C



[Watch Video Solution](#)

7. Candela is the unit of

- A. Intensity of sound
- B. Luminous intensity
- C. Intensity of Electric field
- D. Luminous flux

Answer: B



[Watch Video Solution](#)

8. Unit used to measure nuclear diameters is

- A. formi
- B. angstrom
- C. micron

D. nanometre

Answer: A



[Watch Video Solution](#)

9. Parsec' is the unit of

A. Time

B. Impulse

C. Distance

D. Moment of inertia

Answer: B



[Watch Video Solution](#)

10. 1 kilowatt hour (kWh) is equal to

A. 36 kJ

B. $36 \times 10^{-5} \text{ J}$

C. 360 J

D. $36 \times 10^5 \text{ J}$

Answer: D



[Watch Video Solution](#)

11. The dimensional formula of a pseudo force is

A. $M^{\circ} L^{\circ} T^{-1}$

B. $M^{\circ} L^{\circ} T^{\circ}$

C. $M^{\circ} LT^{\circ}$

D. MLT^{-2}

Answer: D



[Watch Video Solution](#)

12. 1 fermi is equal to

- A. 10^{-7} micron
- B. 10^{-5} angstrom unit
- C. 10^{-3} nanometre
- D. none of the above

Answer: B



[Watch Video Solution](#)

13. One shake is equal to

- A. 10^{-8} s
- B. 10^{-9} s
- C. 10^{-10} s

D. 10^9 S

Answer: A



[Watch Video Solution](#)

14. If P is X-ray unit and Q is micron, then $\frac{P}{Q} =$

A. 10^7

B. 10^{-7}

C. 10^5

D. 10^{-3}

Answer: B



[Watch Video Solution](#)

15. Which of the following is not expressed correctly with respect to units?

A. Specific heat $\rightarrow J kg^{-1} K^{-1}$

B. Entropy $\rightarrow Jk^{-1}$

C. Thermal capacity $\rightarrow J Kg^{-1}$

D. Temperature gradient $\rightarrow m^{-1} k$

Answer: C



[Watch Video Solution](#)

16. Unit of Stefan's constant is :-

A. $W m^{-2} K^{-4}$

B. $J m^{-2} K^{-4}$

C. $W m^{-1} K^{-1}$

D. $W m^{-2} K^{-2}$

Answer: A



[Watch Video Solution](#)

17. A and B are the numerical values of a physical quantity and C and D are its units in two systems of measurement . If $C > D$, then

A. $A > B$

B. $A < B$

C. $A = B$

D. A & B cannot be related

Answer: B



[Watch Video Solution](#)

18. Derived unit is

- A. candela
- B. steradian
- C. ampere
- D. volt

Answer: D

 [Watch Video Solution](#)

19. $JKg^{-1}K^{-1}$ is the unit of

- A. Boltzmann constant
- B. PLANCK'S constant
- C. Gas constant
- D. All the above

Answer: C

 [Watch Video Solution](#)

20. The ratio of SI Unit to CGS unit of Planck's constant is

A. 10^7

B. 10^{-7}

C. 10^3

D. 10^5

Answer: A



[Watch Video Solution](#)

21. Steradian is the solid angle subtended at the centre of the sphere by its surface whose area is equal to ___ of the sphere.

A. the radius

B. square of the radius

C. cube of the radius

D. reciprocal of the radius

Answer: B



[Watch Video Solution](#)

22. The dimensional formula for coefficient of viscosity is

A. $ML^{-1}T$

B. $ML^{-1}T^{-1}$

C. MLT^{-1}

D. $M^{-1}L^{-1}T$

Answer: B



[Watch Video Solution](#)

23. $[ML^{-1}T^{-2}]$ is the dimensional formula of

A. Modulus of Elasticity

B. Stress

C. pressure

D. All the above

Answer: D



[Watch Video Solution](#)

24. Heat and Thermal capacity differ in the dimensions of

A. Mass

B. Length

C. Time

D. Temperature

Answer: D



[Watch Video Solution](#)

25. Force constant and surface tension have the same dimensions in

- A. Mass
- B. Length
- C. Time
- D. All the above

Answer: D



[Watch Video Solution](#)

26. Assertion: Relative magnetic permeability has no units and no dimensions.

Reason: $\mu_r = \frac{\mu}{\mu_0}$, where the symbols have their standard meaning.

- A. Intensity of sound
- B. Solid angle

C. Strain

D. Relative density

Answer: B



[Watch Video Solution](#)

27. $\frac{x^2}{\text{mass}}$ has dimensions of kinetic energy. Then x has the dimensions of

A. Pressure

B. Torque

C. Moment of Inertia

D. Impulse

Answer: D



[Watch Video Solution](#)

28. The quantity having negative dimensions in mass is

- A. Gravitational Potential
- B. Gravitational constant
- C. Acceleration due to gravity
- D. none of the above

Answer: B



[Watch Video Solution](#)

29. $h d G$ has the dimensions of (h = height , d = density , G = Gravitational constant)

- A. Pressure
- B. Power
- C. Torque
- D. Acceleration

Answer: D



[Watch Video Solution](#)

30. The quantity having dimensions only in temperature is

- A. Latent heat
- B. Entropy
- C. Specific heat
- D. Coefficient of linear expansion

Answer: D



[Watch Video Solution](#)

31. The dimensional formula for areal velocity is

- A. $M^0 L^2 T$

B. $M^{\circ} L^{-2} T^{-1}$

C. $M^{\circ} L^3 T^{-1}$

D. $M^{\circ} L T^{-2}$

Answer: B



Watch Video Solution

32. If R is the Rydberg constant , C is the velocity and h is the planck's constant , the RCh has the dimesions of

A. Power

B. Angular frequency

C. Wavelength

D. Energy

Answer: D



Watch Video Solution

33. If x times momentum is work, then the dimensions of x are

A. LT^{-1}

B. $L^{-1}T$

C. $ML^{-1}T^{-1}$

D. MLT

Answer: A



[Watch Video Solution](#)

34. The dimensional formula of magnetic induction B is

A. $MT^{-1}A^{-1}$

B. $MT^{-2}A^{-1}$

C. MTA^{-2}

D. $MT^{-2}A$

Answer: B



[Watch Video Solution](#)

35. The physical quantity which has dimensional formula as that of

$$\frac{\text{Energy}}{\text{mass} \times \text{length}} \text{ is}$$

- A. Force
- B. Power
- C. pressure
- D. Acceleration

Answer: D



[Watch Video Solution](#)

36. The modulus of elasticity is dimensionally equivalent to

- A. Stress
- B. Surface tension
- C. Strian
- D. Coefficient of viscosity

Answer: A

 [Watch Video Solution](#)

37. Planck constant has the same dimensions as

- A. Energy
- B. Power
- C. Linear momentum
- D. Angular momentum

Answer: D

 [Watch Video Solution](#)

38. The fundamental unit which has same power in the dimensional formula of surface tension and viscosity is

- A. Mass
- B. length
- C. time
- D. none

Answer: A



[Watch Video Solution](#)

39. The dimensions of thermal resistance are

- A. $M^{-1}L^{-2}T^3K^{-1}$
- B. $M^0L^0T^{-2}$
- C. MLT^{-4}

D. MLT^{-1}

Answer: A



Watch Video Solution

40. The dimensional formula of velocity gradient is

A. $M^0L^0T^{-1}$

B. MLT^1

C. ML^0T^{-1}

D. M^0LT^{-2}

Answer: A



Watch Video Solution

41. Temperature can be expressed as a derived quantity in terms of any of the following

- A. Length and mass
- B. Mass and time
- C. Length , mass and time
- D. In terms of none of these

Answer: D



[Watch Video Solution](#)

42. The dimensional formula of coefficient of kinematic viscosity is

- A. $M^0 L^{-1} T^{-1}$
- B. $M^0 L^2 T^{-1}$
- C. $ML^2 T^{-1}$
- D. $ML^{-1} T^{-1}$

Answer: B



[Watch Video Solution](#)

43. The fundamental physical quantities that have same dimensions in the dimensional formulae of torque and angular momentum are

- A. mass , time
- B. time, length
- C. mass , length
- D. time, mole

Answer: C



[Watch Video Solution](#)

44. The dimensional formula for latent heat is

A. MLT^{-2}

B. ML^2T^{-2}

C. $M^0L^2T^{-2}$

D. MLT^{-1}

Answer: C



Watch Video Solution

45. $ML^{-1}T^2$ represents

A. Stress

B. Young's modulus

C. pressure

D. All the above

Answer: D



Watch Video Solution

46. The dimensional formula for angular momentum is

A. $ML^{-2}T^{-1}$

B. ML^3T^{-1}

C. MLT^{-1}

D. $ML^{-3}T^{-2}$

Answer: A



[Watch Video Solution](#)

47. The physical quantity that has no dimensions is

A. Angular velocity

B. Linear momentum

C. Angular momentum

D. Strain

Answer: D



[Watch Video Solution](#)

48. The energy density and pressure have

- A. same dimensions
- B. different dimensions
- C. No dimensions
- D. none

Answer: A



[Watch Video Solution](#)

49. $ML^{-1}T^2$ represents

A. Moment of a force

B. force

C. Acceleration

D. Momentum

Answer: A



[Watch Video Solution](#)

50. The dimensional formula of torque is

A. M^2LT^{-2}

B. ML^2T^{-2}

C. $M^{-1}L^2T^{-2}$

D. MLT^{-2}

Answer: B



[Watch Video Solution](#)

51. What is the dimensional formula of angular velocity?

A. $M^{-1}L^1T^0$

B. $M^0L^{-1}T^{-1}$

C. $M^{-1}L^{-1}T^0$

D. $M^0L^0T^{-1}$

Answer: D



Watch Video Solution

52. Solar constant and Stefan's constant have same dimensions in

A. mass

B. length

C. Time

D. All the above

Answer: A



[Watch Video Solution](#)

53. Which of the following is the most precise instrument for measuring length?

- A. a vernier callipers with 20 divisions on the sliding scale
- B. a screw gauge of pitch 1 mm and 100 divisions on the circular scale
- C. an optical instrument that can measure length to within a wavelength of light
- D. all the above

Answer: C



[Watch Video Solution](#)

54. For example , the true value of a certain length is near 3.678 cm. In one experiment , the measured value of found to be 3.5 cm, while in another experiment, the length is determined to be 3.38 cm. The first measurement has

- A. more accuracy but less precision
- B. Less accuracy but less precision
- C. more accuracy but more precision
- D. less accuracy but more precision

Answer: A

 [Watch Video Solution](#)

55. For example , the true value of a certain length is near 3.678 cm. In one experiment , the measured value of found to be 3.5 cm, while in another experiment, the length is determined to be 3.38 cm. The first measurement has

- A. more accuracy but less precision
- B. less accuracy but less precision
- C. more accuracy but more precision
- D. less accuracy but more precision

Answer: D

 [Watch Video Solution](#)

56. The errors due to imperfect design or calibration of the measuring instrument are

- A. Random errors
- B. Perfect errors
- C. Personal errors
- D. systematic errors

Answer: D

 [Watch Video Solution](#)

57. For example, if you , by habit, always hold your head a bit too far to the right while reading the position of a needle on the scale, you will introduce an error called as

- A. Random errors
- B. Perfect errors
- C. Parallax errors
- D. Least count errors

Answer: C

 [Watch Video Solution](#)

58. By improving experimental techniques, selecting better instruments and removing personal bias as far as possible, the errors can be minimised

- A. Random errors
- B. Perfect errors
- C. Least count errors
- D. systematic errors

Answer: D

 [Watch Video Solution](#)

59. Unpredictable fluctuations in temperature, voltage supply, mechanical vibrations of experimental set-ups , etc, lead to

- A. Random errors
- B. Perfect errors
- C. Least count errors
- D. systematic errors

Answer: A

 [Watch Video Solution](#)

60. In a measurement, a choice of change of different units

- A. does not change the number of significant figures
- B. increase the number of significant figures
- C. decrease the number of significant figures
- D. may increase or may decrease the number of significant figures

Answer: A

 [Watch Video Solution](#)

61. Zero error in an instrument introduces

- A. Systematic error
- B. Random error
- C. 1 and 2 both

D. Gross error

Answer: A



[Watch Video Solution](#)

62. Which of the following is systematic error

A. least count error

B. parallax error

C. theoretical error

D. all

Answer: D



[Watch Video Solution](#)

63. What type of elements are found to occur in the combined state?

A. Proportional errors

B. Random error

C. determinate errors

D. systematic errors

Answer: B



Watch Video Solution

64. By repeating the same measurement several times, the errors that can be reduced are

A. determinate errors

B. instrumental errors

C. random errors

D. systematic errors

Answer: D

 [Watch Video Solution](#)

65. In an experiment if the measured values of a physical quantity are highly concurrent, these measurements are said to be

- A. accurate
- B. precise
- C. both precise and accurate
- D. neither accurate or precise

Answer: B

 [Watch Video Solution](#)

66. In an experiment if the measured values of a physical quantity have a high degree of closeness to the true value . These measurements are said to be

- A. both precise and accurate
- B. precise
- C. accurate
- D. neither accurate nor precise

Answer: C

 [Watch Video Solution](#)

67. The measured value of physical quantity expressed to infinite number of decimals places is called

- A. practical value
- B. ideal value
- C. absolute value
- D. real value

Answer: B

 [Watch Video Solution](#)

68. The arithmetic mean of several measurements is called

- A. practical value
- B. imaginary value
- C. true value
- D. ideal value

Answer: C

 [Watch Video Solution](#)

69. Zero errors of measuring instruments are called

- A. Indeterminate errors
- B. Random errors
- C. Disproportional emors

D. Instrumental errors

Answer: D



[Watch Video Solution](#)

70. The type of errors that can never be completely eliminated are

- A. determinate error
- B. instrumental errors
- C. proportional errors
- D. random errors

Answer: D



[Watch Video Solution](#)

71. Which of the following error is not systematic errors?

- A. Least count error
- B. Zero error
- C. Backlash error
- D. Theoretical error due to approximate

Answer: C

 [Watch Video Solution](#)

72. Which of the following are intensive properties?

- A. Systematic error
- B. Gross error
- C. random errors
- D. Relative density

Answer: D

 [Watch Video Solution](#)

73. An experimenter measured the diameter of a wire without noting zero error. This error is

- A. Random errors
- B. Systematic error
- C. Gross error
- D. Personal error

Answer: B



[Watch Video Solution](#)

74. Among the following the error that can be eliminated is

- A. Systematic error
- B. Random errors
- C. Gross error

D. none

Answer: A



Watch Video Solution

75. Which of the following time measuring devices is most precise

A. A wall clock

B. A stop watch

C. A digital watch

D. An atomic clock

Answer: D



Watch Video Solution

76. In determining viscosity (η) by poiseuille's method for formula used $\eta = \frac{\pi pr^4}{8vl}$. Which of the quantities in the formula must be measured more accurately

A. p

B. r

C. v

D. l

Answer: B



Watch Video Solution

77. The set of quantities which cannot form a group of fundamental quantities in any system of measurement is

A. Length, mass and time

B. Length , mass and velocity

C. mass , time and velocity

D. Length, time and velocity

Answer: D



[Watch Video Solution](#)

78. The set of quantities which can form a group of fundamental quantities in any system of measurement is

A. Velocity, Acceleration and Force

B. Energy, Velocity and Time

C. Force, Power and Time

D. All the above

Answer: D



[Watch Video Solution](#)

79. Boltzman constant and Plank's constant differ in the dimensions of

- A. Mass and Time
- B. Length and Time
- C. Length and Mass
- D. Time and Temperature

Answer: D



[Watch Video Solution](#)

80. The pair of physical quantities having the same dimensions is

- A. Power and Torque
- B. Thermal capacity and specific heat
- C. Latent heat and gravitational potential
- D. Angular momentum and Impulse

Answer: C



Watch Video Solution

81. A scalar quantity and a vector quantity having the same dimensions are

- A. Gravitational potential and latent heat
- B. Force and Tension
- C. Specific heat and gas constant
- D. Frequency and velocity gradient

Answer: D



Watch Video Solution

82. The pair of scalar quantities having the same dimensions is

- A. Moment of force and Torque
- B. Angular velocity and velocity gradient
- C. Thermal capacity and Entropy
- D. Planck's constant and Angular momentum

Answer: C

 [Watch Video Solution](#)

83. The pair of vector quantities having the same dimensions is

- A. Force and Impulse
- B. Moment of inertia and Moment of the couple
- C. Surface Tension and Force constant
- D. Thrust and weight

Answer: D

 [Watch Video Solution](#)

84. Intensity of Magnetization has the same dimensions as

- A. Magnetic susceptibility
- B. Magnetic moment
- C. Intensity of magnetizing field
- D. Magnetic permeability

Answer: C



Watch Video Solution

85. The product of Energy and moment of Inertia has the dimensions same as

- A. The square of linear momentum
- B. The square of angular momentum
- C. Angular impulse

D. Planck's constant

Answer: B



[Watch Video Solution](#)

86. SI unit and CGS unit of certain quantity vary by 10^3 times. That quantity is

- A. Boltzmann constant
- B. Gravitational constant
- C. Planck's constant
- D. Angular momentum

Answer: B



[Watch Video Solution](#)

87. Choose the correct statement

- A. The proportionality constant in an equation can be obtained by dimensional analysis
- B. The equation $V = u + at$ can be derived by dimensional method
- C. The equation $y = A \sin wt$ can not be derived by dimensional method
- D. The equation $\eta = \frac{A}{B} e^{-Br}$ can be derived with dimensional analysis

Answer: B



[Watch Video Solution](#)

88. The pair of physical quantities having the same dimensional formula are

- A. Momentum, impulse
- B. Momentum, energy

C. Energy, pressure

D. Force, power

Answer: A



[Watch Video Solution](#)

89. The pair of physical quantities having the same dimensional formula

A. force and work

B. Work and energy

C. Force and torque

D. Work and power

Answer: B



[Watch Video Solution](#)

90. When 45 g of an unknown compound was dissolved in 500 g of water, the solution has freezing point of $-0.93^{\circ}C$

(i) What is the molecular weight of compound ? ($K_f = 1.86$)

(ii) If empirical formula is CH_2O , what is the molecular formula of compound ?

A. Angular momentum and torque

B. Torque and entropy

C. Power and angular momentum

D. None

Answer: D



[Watch Video Solution](#)

91. The pair of physical quantities not having the same dimensional formula is

A. Acceleration, gravitational field strength

B. Torque, angular momentum

C. Pressure, modulus of elasticity

D. All the above

Answer: B



Watch Video Solution

92. The time of oscillation of a small drop of liquid under surface tension depends upon density ρ , radius r and surface tension, s , as $T \propto \rho^a s^b r^c$, then the decending order of a, b and c is

A. $a > b > c$

B. $a > c > b$

C. $b > a > c$

D. $c > a > b$

Answer: D

 Watch Video Solution

93. With reference to magnetic dipole, match the terms of Column I with the terms of Column II and Choose the correct option from the codes given below.

Column I	Column II
(A) Dipole moment	(p) $-M \cdot B$
(B) Equatorial field for a short dipole	(q) $M \times B$
(C) Axial field for a short dipole	(r) $-\mu_0 m / 4\pi r^3$
(D) External field : Torque	(s) \mathbf{m}
(E) External field : Energy	(t) $\mu_0 2m / 4\pi r^3$

A. Tesla

B. Am^2

C. $N(Am)^{-1}$

D. All the above

Answer: D

 [Watch Video Solution](#)

94. S.I unit of Electric intensity is

A. Hm^{-1}

B. Nm^{-1}

C. Vm^{-1}

D. NC

Answer: C

 [Watch Video Solution](#)

95. Which of the following is expressed correctly

A. Magnetic permeability $\rightarrow Fm^{-1}$

B. permittivity $\rightarrow Hm^{-1}$

C. Relative permittivity $\rightarrow Vm^{-1}$

D. Intensity of Magnetizing field $\rightarrow Am^{-1}$

Answer: D



[Watch Video Solution](#)

96. Find SI units of thermal resistance.

A. Wk^{-1}

B. $W^{-1}K$

C. $W^{-1}K^{-1}$

D. $w m^{-1}K^{-1}$

Answer: B



[Watch Video Solution](#)

97. Dimensional formula of Intensity of magnetization is

A. IL

B. IL^{-2}

C. IL^{-1}

D. $I^{-1}L$

Answer: C



Watch Video Solution

98. The dimensional formula of the physical quantity whose S.I. unit is farad is

A. $ML^2T^{-3}I^{-2}$

B. $M^{-1}L^{-3}T^4I^2$

C. $M^{-1}L^{-2}T^4I^2$

D. $M^{-1}L^{-2}L^2$

Answer: C

 [Watch Video Solution](#)

99. The dimensional formula of the physical quantity whose S.I. unit is Hm^{-1} is

A. $ML^2T^{-2}I^{-2}$

B. $MLT^{-2}I^{-2}$

C. $M^2L^2T^{-2}I^{-2}$

D. MLT^2I^2

Answer: B

 [Watch Video Solution](#)

100. The pair of quantities having neither units nor dimensions is

A. Plane angle and specific gravity

B. Magnetic permeability and Relative permittivity

C. Coefficient of friction and coefficient of restitution

D. Linear momentum and Angular momentum

Answer: C



[Watch Video Solution](#)

101. Dimensionless quantity is

A. Intensity level of sound

B. Magnetic susceptibility

C. Refractive Index

D. All the above

Answer: D



[Watch Video Solution](#)

102. Dielectric constant has the same dimensions

- A. Stress
- B. Strain
- C. Electric capacity
- D. Electric permittivity

Answer: B



Watch Video Solution

103. the dimensions of electric current in electric conductivity are

- A. 1
- B. 2
- C. 3
- D. - 2

Answer: B



[Watch Video Solution](#)

104. Choose the false statement

- A. Relative permittivity is a dimensionless constant
- B. Angular displacement has neither units nor dimensions
- C. Refractive index is dimensionless variable
- D. Permeability of vacuum is a dimensional constant

Answer: B



[Watch Video Solution](#)

105. The pair of quantities having same units and dimensions is

- A. Focal power and Magnifying power

B. Tension and surface Tension

C. Force and Electromotive force

D. Power and electric power

Answer: D



[Watch Video Solution](#)

106. $\frac{he}{4\pi m}$ has the same dimensions as (h = Planck's constant , e = charge , m = mass.)

A. Magnetic moment

B. Magnetic induction

C. Angular momentum

D. Pole strength

Answer: A



[Watch Video Solution](#)

107. $\frac{M}{Vr}$ has the dimensions of (M = Magnetic moment, V = velocity, r = radius)

- A. Pole strength
- B. Electric charge
- C. Electric potential
- D. Force

Answer: B



[Watch Video Solution](#)

108. The dimensional formula for the capacitance of a capacitor is

- A. $M^{-1}L^{-2}T^{-4}I^2$
- B. $M^{-1}L^{-2}T^4I^2$
- C. $ML^2T^{-4}I^{-2}$

D. $ML^{-2}T^4I^{-2}$

Answer: B



Watch Video Solution

109. The SI unit of magnetic flux is

A. $W \frac{b}{m^2}$

B. Am^2

C. Oersted

D. Weber

Answer: D



Watch Video Solution

110. The physical quantities not having same dimensions are

- A. torque and work
- B. momentum and planck's constant
- C. stress and Young's modulus
- D. speed and $\mu_0 \epsilon_0^{-1/2}$

Answer: B

 [Watch Video Solution](#)

111. Fundamental unit out of the following is

- A. ampere
- B. newton
- C. ohm
- D. weber

Answer: A

 [Watch Video Solution](#)

112. The ratio of SI unit of CGS unit of a physical constant is 10^7 . That constant is

- A. Universal gas constant
- B. Universal gravitational constant
- C. Magnetic induction
- D. Impulse

Answer: A



[Watch Video Solution](#)

113. Electron volt is the unit of

- A. Power
- B. Potential
- C. Electron charge

D. Energy

Answer: D



[Watch Video Solution](#)

114. The unit of reduction factor of tangent galvanometer

A. Ampere

B. Gauss

C. Radian

D. None

Answer: A



[Watch Video Solution](#)

115. The *SI* unit of magnetic permeability is

A. Am^{-1}

B. Am^{-2}

C. Hm^{-1}

D. Hm^{-2}

Answer: C



[Watch Video Solution](#)

116. $ML^2T^{-2}I^{-2}$ is the dimensional formula for

A. Self inductance

B. Magnetic induction

C. Magnetic moment

D. Electric conductance

Answer: A



[Watch Video Solution](#)

117. Magnetic induction and magnetic flux differ in the dimensions of

- A. Mass
- B. Electric current
- C. Length
- D. Time

Answer: C



[Watch Video Solution](#)

118. Electromotive force and Electric potential differ in the dimensions of

- A. Mass
- B. Length
- C. Electric current

D. none of the above

Answer: D



[Watch Video Solution](#)

119. Let $[\epsilon_0]$ denote the dimensional formula of the permittivity of vacuum. If M = mass, L = length, T = time and A = electric current, then:

A. $\epsilon_0 = M^{-1}L^2T^{-1}A$

B. $\epsilon_0 = M^{-1}L^{-3}T^2A$

C. $\epsilon_0 = M^{-1}L^{-3}T^4A^2$

D. $\epsilon_0 = M^{-1}L^2T^{-1}A^{-2}$

Answer: C



[Watch Video Solution](#)

120. Which of the following pairs is related as in work and force ?

- A. Electric potential and electric intensity
- B. Momentum and velocity
- C. Impulse and force
- D. Resistance and voltage

Answer: A



[Watch Video Solution](#)

121. The dimensional formula for magnetic flux is

- A. $ML^2T^{-2}I^{-1}$
- B. $ML^2T^{-2}I^{-2}$
- C. $ML^{-2}T^{-2}I^{-1}$
- D. $ML^{-2}T^{-2}I^{-2}$

Answer: A



[Watch Video Solution](#)

122. The unit and dimensions of impedance in terms of charge Q are

A. ohm, $ML^2T^{-2}Q^{-2}$

B. ohm, $ML^2T^{-1}Q^{-2}$

C. ohm, $ML^{-2}T^{-2}Q^{-1}$

D. ohm, $MLT^{-1}Q^{-1}$

Answer: B



[Watch Video Solution](#)

123. The dimesions of $\frac{1}{2}\epsilon_0 E^2$ (ϵ_0 is the permittivity of the space and E is electric field),is

A. ML^2T^{-2}

B. MLT^{-2}

C. $ML^{-1}T^{-2}$

D. $ML^{-2}T^{-1}$

Answer: C



Watch Video Solution

124. Using mass (M), length (L), time (T), and electric current (A) as fundamental quantities, the dimensions of permittivity will be

A. $MLT^{-1}A^{-1}$

B. $MLT^{-2}A^{-2}$

C. $M^{-1}L^{-3}T^{+4}A^2$

D. $M^2L^{-2}T^{-2}A^2$

Answer: C

 [Watch Video Solution](#)

125. Dimensions of $\frac{1}{\mu_0 \epsilon_0}$, where symbols have their usual meaning are

- A. $L^{-1}T$
- B. L^2T^2
- C. L^2T^{-2}
- D. LT^{-1}

Answer: C

 [Watch Video Solution](#)

126. If C and R denote capacitance and resistance respectively, then the dimensional formula of CR is

- A. $[M^\circ L^\circ T]$
- B. $[M^\circ L^\circ T^\circ]$

C. $[M^{\circ} L^{\circ} T^{-1}]$

D. Not expressible in terms of [MLT]

Answer: A



[Watch Video Solution](#)

127. The dimensional formula for angular momentum is

A. $[M^{\circ} L^2 T^{-2}]$

B. $[ML^2 T^{-1}]$

C. $[MLT^{-1}]$

D. $[ML^2 T^{-2}]$

Answer: B



[Watch Video Solution](#)

128. Of the following quantities, which one has dimensions different from the remaining three ?

- A. Energy per unit volume
- B. Force per unit area
- C. Product of voltage and charge per unit volume
- D. Angular momentum

Answer: D



[Watch Video Solution](#)

129. Dimensional formula of self-inductance is

- A. $[MLT^{-2}A^{-2}]$
- B. $[ML^2T^{-1}A^{-2}]$
- C. $[ML^2T^{-2}A^{-2}]$
- D. $[ML^2T^{-2}A^{-1}]$

Answer: C



Watch Video Solution

130. If $x = at + bt^2$, where x is the distance travelled by the body in kilometer while t is the time in second, then the unit of b is

A. km/s

B. km-s

C. km/s²

D. km-s²

Answer: C



Watch Video Solution

131. The dimensional formula of torque is

A. $[ML^2T^{-2}]$

B. $[MLT^{-2}]$

C. $[ML^{-1}T^{-2}]$

D. $[ML^{-2}T^{-2}]$

Answer: A



Watch Video Solution

132. The dimensional formula of pressure is

A. $[MLT^{-2}]$

B. $[ML^{-1}T^2]$

C. $[ML^{-1}T^{-2}]$

D. $[MLT^2]$

Answer: C



Watch Video Solution

133. Turpentine oil is flowing through a tube of length L and radius r . The pressure difference between the two ends of the tube is p , the viscosity of the oil is given by $\eta = \frac{p(r^2 - x^2)}{4vL}$, where v is the velocity of oil at a distance x from the axis of the tube. From this relation, the dimensions of viscosity η are

A. $[M^\circ L^\circ T^\circ]$

B. $[MLT^{-1}]$

C. $[ML^2T^{-2}]$

D. $[ML^{-1}T^{-1}]$

Answer: D



Watch Video Solution

134. According to Newton, the viscous force acting between liquid layers of area A and velocity gradient $\frac{\Delta v}{\Delta z}$ is given by $F = -\eta A \frac{dv}{dz}$, where η is

constant called

A. $[ML^{-2}T^{-2}]$

B. $[M^0L^0T^0]$

C. $[ML^2T^{-2}]$

D. $[ML^{-1}T^{-1}]$

Answer: D



Watch Video Solution

135. Which of the following is a dimensional constant ?

A. Refractive index

B. Poisson's ratio

C. Relative density

D. Gravitational constant

Answer: D



Watch Video Solution

136. Which of the following will have the dimensions of time ?

A. LC

B. $\frac{R}{L}$

C. $\frac{L}{R}$

D. $\frac{C}{L}$

Answer: C



Watch Video Solution

137. Which of the following is the most precise instrument for measuring length?

A. Vernier calipers

B. Screw guage

C. Optical instrument

D. All the above

Answer: C



[Watch Video Solution](#)

138. Which of the following sets cannot enter into the list of fundamental quantities in any system of units ?

A. length, mass and velocity

B. pressure, density and velocity

C. force, velocity and time

D. force, momentum and length

Answer: B



[Watch Video Solution](#)

139. The dimensional formula for magnetic flux is

A. $[ML^2T^{-2}A^{-1}]$

B. $[ML^3T^{-2}A^{-2}]$

C. $[M^{\circ}L^{-2}T^2A^{-2}]$

D. $[ML^2T^{-1}A^2]$

Answer: A



Watch Video Solution

140. A pair of physical quantities having same dimensional formula is

A. force and torque

B. work and energy

C. force and impulse

D. linear momentum and angular momentum

Answer: A



[Watch Video Solution](#)

141. The value of Planck's constant in SI unit is

A. 6.63×10^{-31} J-s

B. 6.63×10^{-30} kg - m/s

C. 6.63×10^{-32} kg- m/s

D. 6.63×10^{-34} j-s

Answer: D



[Watch Video Solution](#)

142. SI unit of permittivity of free space is

A. coulomb/newton-metre

B. $\text{newton-metre}^2 / \text{coulomb}^2$

C. $\text{coulomb}^2 / \text{newton-metre}^2$

D. $\text{coulomb}^2 / \text{newton-metre}^2$

Answer: C



Watch Video Solution

143. The dimensions of universal gravitational constant are ____

A. $[M^{-1}L^3T^{-2}]$

B. $[ML^2T^{-1}]$

C. $[M^{-2}L^3T^{-2}]$

D. $[M^{-2}L^2T^{-3}]$

Answer: A



Watch Video Solution

144. The ratio of the dimensions of Planck's constant and that of the moment of inertia has the dimensions of

- A. velocity
- B. angular momentum
- C. time
- D. frequency

Answer: D



[Watch Video Solution](#)

145. The velocity v of a particle at time t is given by $v = at + \frac{b}{t + c}$, where a, b and c are constants. The dimensions of a, b and c are, respectively.

- A. LT^{-2} , L and T
- B. L^2 , T and LT^2

C. LT^2 , LT and L

D. L , LT and T^2

Answer: A



[Watch Video Solution](#)

146. Dimensions of resistance in an electrical circuit, in terms of dimension of mass M , of length L , of time T and of current I , would be

A. $ML^2T^{-3}I^{-2}$

B. $ML^2T^{-3}I^{-1}$

C. ML^2T^{-2}

D. $ML^2T^{-1}I^{-1}$

Answer: A



[Watch Video Solution](#)

147. If the error in the measurement of radius of a sphere is 2% , then the error in the determination of volume of the sphere will be

A. 0.02

B. 0.04

C. 0.06

D. 0.08

Answer: C



[Watch Video Solution](#)

148. Which two of the following five physical parameters have the same dimensions?

(i) Energy density

(ii) Refractive index

(iii) Dielectric constant

(iv) Young's modulus

(v) Magnetic field

A. b and d

B. c and e

C. a and d

D. a and e

Answer: C



Watch Video Solution

149. If the dimensions of a physical quantity are given by $[M^a L^b T^c]$, then the physical quantity will be

A. Force If $a = 0$, $b = -1$, $c = -2$

B. Pressure If $a = 1$, $b = -1$, $c = -2$

C. Velocity If $a = 1$, $b = 0$, $c = -1$

D. Acceleration If $a = 1$, $b = 1$, $c = -1$

Answer: B



[Watch Video Solution](#)

150. The dimensions of $\frac{1}{2}\epsilon_0 E^2$, where ϵ_0 is permittivity of free space and E is electric field, are

A. $[ML^2T^{-2}]$

B. $[ML^{-1}T^{-2}]$

C. $[ML^2T^{-1}]$

D. $[MLT^{-1}]$

Answer: B



[Watch Video Solution](#)

151. A student measures the distance traversed in free fall of a body, initially at rest in a given time. He uses this data to estimate g , the acceleration due to gravity. If the maximum percentage errors in measurement of the distance and the time are e_1 and e_2 respectively, the percentage error in the estimation of g is -

A. $e_1 + 2e_2$

B. $e_1 + e_2$

C. $e_1 - 2e_2$

D. $e_2 - e_1$

Answer: A



[Watch Video Solution](#)

152. The density of material in CGS system of mass is $4gcm^3$ in a system of unit in which unit of length is $10cm$ and unit of mass is $100g$ the value of density of material will be

A. 0.04

B. 0.4

C. 40

D. 400

Answer: C



Watch Video Solution

153. The damping force on an oscillator is directly proportional to the velocity. The units of the constant to proportionality are

A. Kgs^{-1}

B. Kg s

C. Kg ms^{-1}

D. Kg ms^{-2}

Answer: A

 [Watch Video Solution](#)

154. If force (F), velocity (v) and time (T) are taken as fundamental units, then find the dimension of mass.

A. $[FV^{-1}T^{-1}]$

B. $[FV^{-1}T]$

C. $[FVT^{-1}]$

D. $[FVT^{-2}]$

Answer: B

 [Watch Video Solution](#)

155. If energy (E), velocity (v) and time (T) are chosen as the fundamental quantities, the dimensional formula of surface tension will be

A. $[E^{-2}V^{-1}T^{-3}]$

B. $[EV^{-2}T^{-1}]$

C. $[EV^{-1}T^{-2}]$

D. $[EV^{-2}T^{-2}]$

Answer: D



Watch Video Solution

156. Planck 's constant (h) speed of length in vaccum (C) and newton 's gravitational constant (G) are three fundamental constant .Which of the following combinations of these has the dimension of length?

A. $\frac{\sqrt{hG}}{C^{3/2}}$

B. $\sqrt{\frac{hG}{c^{5/2}}}$

C. $\sqrt{\frac{hc}{G}}$

D. $\sqrt{\frac{Ge}{h^{3/2}}}$

Answer: A

 [Watch Video Solution](#)

157. A) Work and energy have the same units in any given system of measurement

B) Work and power have the same ratio of SI unit to C.G.S unit

A. Statement A is true and B is false

B. Statement A is false and B is true

C. Both A and B are true

D. Both A and B are false

Answer: C

 [Watch Video Solution](#)

158. A standard unit should be

(a) consistent

(b) reproducible

(c) invariable

(d) easily available for usage

A. Only a& b are true

B. onlye a& c are ture

C. only a,c &d are true

D. a, b, c, d are true

Answer: D



Watch Video Solution

159. The correct order in which the ratio of SI unit to CGS unit increases is

(a) Power (b) Surface tension

(c) Pressure (d) force

A. c, b, d, a

B. c, a, b,d

C. d, a, b, c

D. a, c, d, b

Answer: A



[Watch Video Solution](#)

160. Write the ascending order of the units of length given below .

- (a) Fermi (b) Micron
(c) Angstrom (d) Nanometre

A. a, b, d, c

B. a, c, d, b

C. a, c, b, d

D. a, b, c, d

Answer: B



[Watch Video Solution](#)

161. Out of the following the correct order of dimensions of mass increases is

(A) Velocity (B) Power

(C) Gravitational Constant

A. A, B, C

B. C, A, B

C. A, C, B

D. B, C, A

Answer: B



[Watch Video Solution](#)

162. The correct order in which the dimensions of time decreases in the following physical quantities

A) Power

B) Modulus of elasticity

C) Moment of inertia

D) Angular momentum

A. A, B, D, C

B. C, D, A, B

C. A, C, D, B

D. C, D, B, A

Answer: D



[Watch Video Solution](#)

163. The time period of a seconds pendulum is measured repeatedly for three times by two stop watches A, B. If the readings are as follows

(S.NO., A, B) (1, 2.01sec, 2.56sec), (2, 2.10sec, 2.55sec), (3, 1.98sec, 2.57sec)

A. A is more accurate but B is more precise

B. B is more accurate but A is more precise

C. A, B are equally precise

D. A, B are equally accurate

Answer: A



[Watch Video Solution](#)

164. (A) All zeros to the right of the last nonzero digit after the decimal point are significant.

(B) If the number is less than one, all the zeros to the right of the decimal point but to the left of the first nonzero digit are not significant.

A. Only A is correct

B. A, B are correct

C. Only B is correct

D. A, B are wrong

Answer: B



[Watch Video Solution](#)

165. If the immediate insignificant digit to be dropped is 5 then there will be two different cases

(A) If the preceding digit is even, it is to be unchanged and 5 is dropped.

(B) If the preceding digit is odd, it is to be raised by 1,

A. Only A is correct

B. A, B are correct

C. Only B is correct

D. A, B are wrong

Answer: B



Watch Video Solution

166. A) In multiplication or division, the final result should retain only that many significant figures as are there in the original number with the least number of significant figures.

B) In addition or subtraction the final result should retain only that many

decimal places as are there in the number with the least number of decimal places.

- A. Only A is correct
- B. A, B are correct
- C. Only B is correct
- D. A, B are wrong

Answer: B



[Watch Video Solution](#)

167. The correct order in which the dimensions of 'Length' increases in the following physical quantities is

- A) Permittivity
- B) Resistance
- C) Magnetic permeability
- D) Stress

A. a, b, d, c

B. d, c, b, a,

C. A , C , D , B

D. c,b,d,a

Answer: C



Watch Video Solution

168. (A) : Plane angle has unit but no dimensional formula

(B) : All dimension less quantities are unit less

A. Both A & B are true

B. Both A & B are false

C. Only A is true

D. Only B is true

Answer: C

 [Watch Video Solution](#)

169. Dimensional formulae are used

A) to convert one system of units into another

(B) to find proportionality constants

C) to check the correctness of an equation

A. Only A & B are true

B. Only C is true

C. A & C are true

D. All the true

Answer: C

 [Watch Video Solution](#)

170. (A) The correctness of an equation is verified using the principle of homogeneity

(B) All unit less quantities are dimensional less.

- A. Both A & B are true
- B. Both A & B are false
- C. Only A is true
- D. Only B is true

Answer: A



[Watch Video Solution](#)

171. (A): The value of dimensionless constants or proportionality constants cannot be found by dimensional methods.

(b) : The equations containing trigonometrical, exponential and logarithmic functions cannot be analysed by dimensional methods.

- A. Both A & B are true
- B. Both A & B are false
- C. Only A is true

D. Only B is true

Answer: A



[Watch Video Solution](#)

172. Which of the following is not a unit of time

A) par sec B) light year C) micron D) sec

A. Only A

B. A and B

C. A, B & C

D. A, B , C , D

Answer: C



[Watch Video Solution](#)

173. Which of the following is dimensionless

(a) Boltzmann constant (b) Planks constant

(c) Poissons ratio (d) Relative density

A. Both A & B

B. Both B & C

C. Both C & D

D. Both D & A

Answer: C



[Watch Video Solution](#)

174. For a body in a uniformly accelerated motion, the distance of the body from a reference point at time 't' is given by $x = at + bt^2 + c$, where a, b, c are constants. The dimensions of 'c' are the same as those of

(A) x (B) at (C) bt^2 (D) a^2/b

A. A

B. A & B

C. A, B & C

D. A, B , C & D

Answer: D



Watch Video Solution

175. Three of the quantities defined below has the same dimensional formula. Identify the

i) $\sqrt{\text{Energy/mass}}$

ii) $\sqrt{\text{Pressure/density}}$

iii) $\sqrt{\text{force/linear density}}$

iv) $\sqrt{\text{Angular frequency/radius}}$

A. ii only

B. ii and iii only

C. iii only

D. I, ii and iii only

Answer: D



Watch Video Solution

176. If e , E_0 , h and C respectively represents electronic charge, permittivity of free space, planks constant and speed of light then $\frac{e^2}{E_0 h C}$ has the dimensions of

A) angle B) relative density

C) strain D) current

A. angle

B. relative density

C. strain

D. current

Answer: C



[Watch Video Solution](#)

177. Photon is quantum of radiation with energy $E=h\nu$, where ν is frequency and h is Planck's constant. The dimensions of h are the same as that of

- A. Only A
- B. B and D
- C. A, B, C, D
- D. A and D

Answer: B



[Watch Video Solution](#)

178. The displacement of a particle executing simple harmonic motion is given by $y = 4 \sin(2t + \phi)$. The period of oscillation is

- A. ii only
- B. ii and iii only
- C. iii only
- D. iii and iv only

Answer: C



[Watch Video Solution](#)

179. Match the following :

List - 1

List - 2

(a) second

(e) carbon - 12

(b) mole

(f) Platinum iridium

(c) Metre

(g) Cs - 133

(d) Kilogram

(h) Kr - 86

A. a - h b - f c - g d - e

B. a - g b - h c - e d - f

C. a - g b - e c - h d - f

D. a - f b - g c - e d - h

Answer: B



Watch Video Solution

180. Match the following :

List - 1

List - 2

(a) second

(e) carbon – 12

(b) mole

(f) Platinum iridium

(c) Metre

(g) Cs – 133

(d) Kilogram

(h) Kr – 86

A. a - e b - g c - h d - f

B. a - f b - h c - g d - e

C. a - e b - f c - h d - g

D. a - g b - e c - h d - f

Answer: D

 [Watch Video Solution](#)

List-I

List - 2

(a) m^{-1}

(e) Surface tension

181. (b) Pa (f) Thermal capacity

(c) Jk^{-1}

(g) Rydberg constant

(d) Jm^{-2} (h) Energy density

A. a - h b- f c -e d-g

B. a - g b- h c -e d-f

C. a - g b- h c -f d-e

D. a - f b- e c -g d-h

Answer: C

 [Watch Video Solution](#)

List-I

List-2

(a) Electron volt (e) 746W

182. (b) kWh (f) $10^{-15}m$

(c) Horse power (g) $36 \times 10^5 J$

(d) Fermi (h) $1.6 \times 10^{-19} J$

A. a - h b - g c - e d - f

B. a - h b - f c - g d - e

C. a - g b - h c - e d - f

D. a - h b - g c - f d - e

Answer: A



Watch Video Solution

List-I

List-2

(a) Pressure (e) $ML^2T^{-2}I^{-1}$

183. (b) Latent heat (f) $M^0L^0T^{-1}$

(c) Velocity gradient (g) $ML^{-1}T^{-2}$

(d) Magnetic flux (h) $M^0L^2T^{-2}$

A. a - h b - f c - g d - e

B. a - g b- h c -e d-f

C. a - g b- h c -f d-e

D. a - f b- g c -e d-h

Answer: C



Watch Video Solution

184. Match the following :

List - 1

List - 2

(a) second

(e) carbon – 12

(b) mole

(f) Platinum iridium

(c) Metre

(g) Cs – 133

(d) Kilogram

(h) Kr – 86

A. a - e b- g c -h d-f

B. a - f b- h c -g d-e

C. a - g b- f c -h d-e

D. a - g b- e c -h d-f

Answer: D



Watch Video Solution

185. $h d G$ has the dimensions of (h = height , d = density , G = Gravitational constant)

A. a - g b- e c -h d-f

B. a - g b- h c -e d-f

C. a - e b- f c -g d-h

D. a - f b- e c -h d-g

Answer: A



Watch Video Solution

186. Some physical constants are given in List-1 and their dimensional formulae are given in List-2. Match the correct pairs in the lists

List-I

(a) Planck's constant

(b) Gravitational constant

(c) Bulk modulus

(d) Coefficient of viscosity

List-2

(e) $ML^{-1}T^{-2}$

(f) $ML^{-1}T^{-1}$

(g) $ML^{-2}T^{-1}$

(h) $M^{-1}L^3T^{-2}$

A. a - h b - g c - f d - e

B. a - f b - e c - g d - h

C. a - g b - f c - e d - h

D. a - g b - h c - e d - f

Answer: D



Watch Video Solution

187. Dimensional formula for thermal conductivity is (here K denotes the temperature) :

A. $L^2T^{-2}K^{-1}$

B. L^2T^2

C. $ML^2T^1L^{-1}$

$$D. MLT^{-3}K^{-1}$$

Answer: D

 [Watch Video Solution](#)

EXERCISE- 1 B

1. Gibbs-Helmholtz equation relates the free energy change to the enthalpy and entropy changes of the process as

$$(\Delta G)_{PT} = \Delta H - T\Delta S$$

The magnitude of ΔH does not change much with the change in temperature but the energy factor $T\Delta S$ changes appreciably. Thus, spontaneity of a process depends very much on temperature.

The dissolution of $CaCl_2 \cdot 6H_2O$ in a large volume of water is endothermic to the extent of $3.5 kcal mol^{-1}$. For the reaction, $CaCl_2(s) + 6H_2O(l) \rightarrow CaCl_2 \cdot 6H_2O(s)$ ΔH is $-23.2 kcal$. The heat of solution of anhydrous $CaCl_2$ in large quantity of water will be

- A. Both (A) and (R) are true and (R) is the correct explanation of (A)
- B. Both (A) and (R) are true and (R) is not the correct explanation of (A)
- C. (A) is true but (R) is false
- D. Both (A) and (R) are false

Answer: A



Watch Video Solution

2. (A) : Increasing the number of observations minimizes random errors.

(R) : Positive and negative random errors occur with equal probability.

- A. Both (A) and (R) are true and (R) is the correct explanation of (A)
- B. Both (A) and (R) are true and (R) is not the correct explanation of (A)
- C. (A) is true but (R) is false

D. Both (A) and (R) are false

Answer: A



[Watch Video Solution](#)

3. A buffer solution can be obtained from

A. Both (A) and (R) are true and (R) is the correct explanation of (A)

B. Both (A) and (R) are true and (R) is not the correct explanation of (A)

C. (A) is true but (R) is false

D. Both (A) and (R) are false

Answer: D



[Watch Video Solution](#)

4. The physical quantities not having same dimensions are

- A. Both (A) and (R) are true and (R) is the correct explanation of (A)
- B. Both (A) and (R) are true and (R) is not the correct explanation of (A)
- C. (A) is true but (R) is false
- D. Both (A) and (R) are false

Answer: A



[Watch Video Solution](#)

5. A dimensionless quantity

- A. Both (A) and (R) are true and (R) is the correct explanation of (A)
- B. Both (A) and (R) are true and (R) is not the correct explanation of (A)

C. (A) is true but (R) is false

D. Both (A) and (R) are false

Answer: B

 [Watch Video Solution](#)

6. If you look out of the window of a fast moving train the nearby trees, houses etc., seem to move rapidly in a direction opposite to the train's motion, but the distant objects seem to be stationary. Why?

A. Both (A) and (R) are true and (R) is the correct explanation of (A)

B. Both (A) and (R) are true and (R) is not the correct explanation of (A)

C. (A) is true but (R) is false

D. Both (A) and (R) are false

Answer: A



[Watch Video Solution](#)

7. A : PARSEC and light year, both measure time

R : Both have dimension of time.

- A. Both (A) and (R) are true and (R) is the correct explanation of (A)
- B. Both (A) and (R) are true and (R) is not the correct explanation of (A)
- C. (A) is true but (R) is false
- D. Both (A) and (R) are false

Answer: A



[Watch Video Solution](#)

8. A : A unitless physical quantity must be dimensionless.

R : A pure number is always dimensionless.

- A. Both (A) and (R) are true and (R) is the correct explanation of (A)
- B. Both (A) and (R) are true and (R) is not the correct explanation of (A)
- C. (A) is true but (R) is false
- D. Both (A) and (R) are false

Answer: B

 [Watch Video Solution](#)

9. A : Absolut error is unitless and dimensionless.

R : All type of errors are unitless and dimensionless.

- A. Both (A) and (R) are true and (R) is the correct explanation of (A)
- B. Both (A) and (R) are true and (R) is not the correct explanation of (A)
- C. (A) is true but (R) is false

D. Both (A) and (R) are false

Answer: D

 [Watch Video Solution](#)

10. A : Higher is the accuracy of measurement, if instrument have smaller least count.

R : Smaller the percentage error, higher is the accuracy of measurement.

- A. Both (A) and (R) are true and (R) is the correct explanation of (A)
- B. Both (A) and (R) are true and (R) is not the correct explanation of (A)
- C. (A) is true but (R) is false
- D. Both (A) and (R) are false

Answer: B

 [Watch Video Solution](#)

11. A : The maximum possible error in a reading is taken as least count of the measuring instrument.

R : Error in a measurement cannot be greater than least count of the measuring instrument.

- A. Both (A) and (R) are true and (R) is the correct explanation of (A)
- B. Both (A) and (R) are true and (R) is not the correct explanation of (A)
- C. (A) is true but (R) is false
- D. Both (A) and (R) are false

Answer: C



[Watch Video Solution](#)

12. A : In a measurement, two readings obtained are 20.004 and 20.0004.
The second measurement is more precise.

R : Measurement having more decimal places is more precise.

- A. Both (A) and (R) are true and (R) is the correct explanation of (A)
- B. Both (A) and (R) are true and (R) is not the correct explanation of (A)
- C. (A) is true but (R) is false
- D. Both (A) and (R) are false

Answer: A



[Watch Video Solution](#)

13. A : Out of the measurements $A = 20.00$ and $B = 20.000$, B is more accurate.

R : Percentage error in B is less than the percentage error in A.

- A. Both (A) and (R) are true and (R) is the correct explanation of (A)

B. Both (A) and (R) are true and (R) is not the correct explanation of

(A)

C. (A) is true but (R) is false

D. Both (A) and (R) are false

Answer: A



Watch Video Solution

14. A : All physically correct equations are dimensionally correct.

R : All dimensionally correct equations are physically correct.

A. Both (A) and (R) are true and (R) is the correct explanation of (A)

B. Both (A) and (R) are true and (R) is not the correct explanation of

(A)

C. (A) is true but (R) is false

D. Both (A) and (R) are false

Answer: C

 [Watch Video Solution](#)

15. A : Physical relations involving addition and subtraction cannot be derived by dimensional analysis.

R : Numerical constants cannot be deduced by the method of dimensions.

- A. Both (A) and (R) are true and (R) is the correct explanation of (A)
- B. Both (A) and (R) are true and (R) is not the correct explanation of (A)
- C. (A) is true but (R) is false
- D. Both (A) and (R) are false

Answer: B

 [Watch Video Solution](#)

16. A : An exact number has infinite number of significant digits.

R : A number, which is not a measured value has infinite number of significant digits.

- A. Both (A) and (R) are true and (R) is the correct explanation of (A)
- B. Both (A) and (R) are true and (R) is not the correct explanation of (A)
- C. (A) is true but (R) is false
- D. Both (A) and (R) are false

Answer: B



[Watch Video Solution](#)

17. A : A dimensionless quantity may have unit.

R : Two physical quantities having same dimensions, may have different units.

- A. Both (A) and (R) are true and (R) is the correct explanation of (A)
- B. Both (A) and (R) are true and (R) is not the correct explanation of (A)
- C. (A) is true but (R) is false
- D. Both (A) and (R) are false

Answer: B



[Watch Video Solution](#)

18. If $Q = \frac{x^n}{y^m}$ and $\Delta x, \Delta y$ are absolute errors in the measurement of x and y then absolute error ΔQ in Q is

- A. Both (A) and (R) are true and (R) is the correct explanation of (A)
- B. Both (A) and (R) are true and (R) is not the correct explanation of (A)
- C. (A) is true but (R) is false

D. Both (A) and (R) are false

Answer: C



[Watch Video Solution](#)

19. State true or false:

A point has no dimensions.

A. Both (A) and (R) are true and (R) is the correct explanation of (A)

B. Both (A) and (R) are true and (R) is not the correct explanation of

(A)

C. (A) is true but (R) is false

D. Both (A) and (R) are false

Answer: D



[Watch Video Solution](#)

20. Ampere second is a unit of

- A. Both (A) and (R) are true and (R) is the correct explanation of (A)
- B. Both (A) and (R) are true and (R) is not the correct explanation of (A)
- C. (A) is true but (R) is false
- D. Both (A) and (R) are false

Answer: A



[Watch Video Solution](#)

21. (A): The distance of a star from earth can be measured by parallax method.

(R): The change in position of an object due to change in the point of observation is called parallax.

- A. Both (A) and (R) are true and (R) is the correct explanation of (A)

B. Both (A) and (R) are true and (R) is not the correct explanation of

(A)

C. (A) is true but (R) is false

D. Both (A) and (R) are false

Answer: A



Watch Video Solution

22. A unitless quantity

A. Both (A) and (R) are true and (R) is the correct explanation of (A)

B. Both (A) and (R) are true and (R) is not the correct explanation of

(A)

C. (A) is true but (R) is false

D. Both (A) and (R) are false

Answer: C



[Watch Video Solution](#)

23. A more accurate measure of biomass will be in terms of

- A. Both (A) and (R) are true and (R) is the correct explanation of (A)
- B. Both (A) and (R) are true and (R) is not the correct explanation of (A)
- C. (A) is true but (R) is false
- D. Both (A) and (R) are false

Answer: A



[Watch Video Solution](#)

24. (A): Systematic errors are due to a definite cause and can be minimised.

(R): Random errors are due to unknown reasons and can be completely eliminated.

- A. Both (A) and (R) are true and (R) is the correct explanation of (A)
- B. Both (A) and (R) are true and (R) is not the correct explanation of (A)
- C. (A) is true but (R) is false
- D. Both (A) and (R) are false

Answer: C

 [Watch Video Solution](#)

25. Statement-I : When an algebraic equation has been derived, it is advisable to check it for dimensional consistency.

Statement-II : This guarantee that the equation is correct.

- A. Both (A) and (R) are true and (R) is the correct explanation of (A)
- B. Both (A) and (R) are true and (R) is not the correct explanation of (A)
- C. (A) is true but (R) is false

D. Both (A) and (R) are false

Answer: C

 [Watch Video Solution](#)

26. (A): The order of accuracy of a measurement depends on the least count of the instrument.

(R): The smaller the least count, more number of significant figures are in the measured value.

A. Both (A) and (R) are true and (R) is the correct explanation of (A)

B. Both (A) and (R) are true and (R) is not the correct explanation of (A)

C. (A) is true but (R) is false

D. Both (A) and (R) are false

Answer: B

 [Watch Video Solution](#)

27. (A): The method of dimensions cannot be used to obtain the dependence of work done by a force when the force is inclined to the direction of displacement.

(R): All trigonometric functions are dimensionless.

- A. Both (A) and (R) are true and (R) is the correct explanation of (A)
- B. Both (A) and (R) are true and (R) is not the correct explanation of (A)
- C. (A) is true but (R) is false
- D. Both (A) and (R) are false

Answer: A



28. (A) : Mass, Volume and time may be taken as fundamental quantities in a system.

(R) : Quantities which are independent of one another are called fundamental quantities.

- A. Both (A) and (R) are true and (R) is the correct explanation of (A)
- B. Both (A) and (R) are true and (R) is not the correct explanation of (A)
- C. (A) is true but (R) is false
- D. Both (A) and (R) are false

Answer: A



[Watch Video Solution](#)

1. The density of mercury is 13.6gcm^{-3} in CGS system. Its density in SI system is :

- A. 136kg/M^3
- B. $1360\text{kg}/\text{m}^3$
- C. $13600\text{kg}/\text{m}^3$
- D. $1.36\text{kg}/\text{m}^3$

Answer: C



[Watch Video Solution](#)

2. A force of 40N acts on a body. If the units of mass and length are doubled and the unit of time is tripled, then the force in the new system becomes

- A. 90 N
- B. 90 new units

C. $\frac{160}{9}$ new units

D. $\frac{160}{9}$ N

Answer: B



[Watch Video Solution](#)

3. If the unit of force were 10N, that of power were 1 MW and that of time were 1 millisecond then the unit of length would be

A. 1 m

B. 100 m

C. 10^3 m

D. 10^{-2} m

Answer: B



[Watch Video Solution](#)

4. If the unit of power is million erg/minute, the unit of force is 1000 dyne and the unit of length is $\frac{5}{3}$ cm then the unit of time is (in second).

A. 10

B. 1

C. $\frac{1}{10}$

D. $\frac{1}{100}$

Answer: C



Watch Video Solution

5. If the unit of length is doubled, unit of time is halved and unit of force is quadrupled, the unit of power would change by the factor

A. $\frac{1}{4}$

B. 16

C. $\frac{1}{16}$

D. 8

Answer: B



[Watch Video Solution](#)

6. The density of a material in CGS system is $2g/cm^3$. In a system of units in which unit of length is 2 cm and unit of mass is 4 g what is the numerical value of the density of the material?

A. 4

B. 2

C. 1

D. 0.5

Answer: A



[Watch Video Solution](#)

7. In *CGS* system the magnitude of the force is 100 dynes. In another system where the fundamental physical quantities are kilogram , meter , and minute, find the magnitude of the force.

A. 0.036

B. 0.36

C. 3.6

D. 36

Answer: C



[Watch Video Solution](#)

8. The volume V of a liquid crossing through a tube is related to the area of cross-section A , velocity v and time t as $V \propto A^a v^b t^c$ which of the following is correct (given $a \neq 1$)

A. $a \neq b \neq c$

B. $a = b = c$

C. $a \neq b = c$

D. $a = b \neq c$

Answer: C



Watch Video Solution

9. The critical velocity v of a body depends on the coefficient of viscosity η the density d and radius of the drop r . If K is a dimensionless constant then v is equal to

A. $\frac{K\eta d}{r}$

B. $\frac{Kd}{\eta r}$

C. $\frac{K\eta}{dr}$

D. $\frac{Kr}{\eta r}$

Answer: C



Watch Video Solution

10. If density (D), acceleration (a) and force (F) are taken as basic quantities, then Time period has dimensions

A. $\frac{1}{6}$ in F

B. $-\frac{1}{6}$ in D

C. $-\frac{2}{3}$ in a

D. All the above are true

Answer: D



[Watch Video Solution](#)

11. The critical angular velocity w of a cylinder inside another cylinder containing a liquid at which its turbulence occurs depends on viscosity η , density d and the distance x between the walls of the cylinders. Then w is proportional to

A. $\frac{\eta}{x^2 d}$

B. $\frac{\eta}{d^2x}$

C. $\frac{\eta^2}{xd}$

D. $\frac{xd}{\eta}$

Answer: A



Watch Video Solution

12. A liquid drop of density ρ , radius r , and surface tension σ oscillates with time period T . Which of the following expressions for T^2 is correct?

A. $\rho r^3 / \sigma$

B. $\rho \sigma / r^3$

C. $r^3 \sigma / \rho$

D. None

Answer: A



Watch Video Solution

13. The volume of a liquid (V) flowing per second through a cylindrical tube depends upon the pressure gradient (p/l) radius of the tube (r) coefficient of viscosity (η) of the liquid by dimensional method the correct formula is

A. $V \propto \frac{Pr^4}{\eta l}$

B. $V \propto \frac{Pr}{\eta l^4}$

C. $V \propto \frac{Pl^4}{\eta r}$

D. None

Answer: A



Watch Video Solution

14. The dimensions of resistivity in terms of M, L, T and Q, where Q stands for the dimensions of charge is

A. $ML^3T^{-1}Q^{-2}$

B. $ML^3T^{-2}Q^{-1}$

C. $ML^2T^{-1}Q^{-1}$

D. $MLT^{-1}Q^{-1}$

Answer: A



Watch Video Solution

15. The distance travelled by a particle in n^{th} second is

$S_n = u + \frac{a}{2}(2n - 1)$ where u is the velocity and a is the acceleration.

The equation is

A. dimensionally true

B. dimensionally false

C. numerically may be true or false

D. 1 and 3 are correct

Answer: A



Watch Video Solution

16. The position of a particle at time 't' is given by the equation :

$$X(t) = \frac{V_0}{A} (1 - e^{-At})$$

$V_0 = \text{constant}$ and $A > 0$

Dimensions of V_0 and A respectively are :

A. $M^0 LT^0$ and T^{-1}

B. $M^0 LT^{-1}$ and LT^{-2}

C. $M^0 LT^{-1}$ and T

D. $M^0 LT^{-1}$ and T^{-1}

Answer: D



Watch Video Solution

17. If J is the angular momentum and E is the kinetic energy, then $\frac{J^2}{E}$ has the dimensions of

- A. Moment of Inertia
- B. Power
- C. Angular velocity
- D. Impulse

Answer: A



Watch Video Solution

18. If L is the inductance, C is the capacitance and R is the resistance, then

$R\sqrt{\frac{C}{L}}$ has the dimension

- A. $MLT^{-2}I^{-2}$
- B. ML^2T^2I
- C. $ML^{-1}T^{-2}I^{-1}$

D. $M^0 L^0 T^0 I^0$

Answer: D



[Watch Video Solution](#)

19. If h is Planck's constant and λ is the wave length, $\frac{h}{\lambda}$ has the dimensions of

- A. Energy
- B. Momentum
- C. Moment of Inertia
- D. Frequency

Answer: B



[Watch Video Solution](#)

20. Which of the following combinations of three different physical quantities P, Q, R can never be a meaningful quantity?

A. $PQ - R$

B. $\frac{PQ}{R}$

C. $\frac{P - Q}{R}$

D. $\frac{PR - Q^2}{QR}$

Answer: C



[Watch Video Solution](#)

21. Which of the following physical quantities represent the dimensions

of $\frac{b}{a}$ in the relation $P = \frac{x^2 - b}{at}$, where p is power x is distance and t

is time

A. power

B. Energy

C. Torsional constant

D. Force

Answer: B



[Watch Video Solution](#)

22. The radius of a sphere is measured as $(10 \pm 0.02 \%)$ cm. The error in the measurement of its volume is

A. 25.1 cc

B. 25.12cc

C. 2.5 cc

D. 251.2 cc

Answer: C



[Watch Video Solution](#)

23. If length and breadth of a plane are (40 ± 0.2) and (30 ± 0.1) cm, the absolute error in measurement of area is

A. 10cm^2

B. 8cm^2

C. 9cm^2

D. 7cm^2

Answer: A



[Watch Video Solution](#)

24. When 10 observation are taken the random error is x when 100 observation are taken the random error becomes

A. $x / 10$

B. x^2

C. $10 x$

D. \sqrt{x}

Answer: A



Watch Video Solution

25. The diameter of a wire as measured by a screw gauge was found to be 1.002 cm, 1.000 cm, 1.006 cm. The absolute error in the second reading is

A. 0.002 cm

B. 0.004cm

C. 0.006cm

D. 0.003cm

Answer: D



Watch Video Solution

26. The percentage error in the measurement of mass and speed are 2% and 3% respectively. Maximum estimate of percentage error of K.E

- A. 0.11
- B. 0.08
- C. 0.05
- D. 0.01

Answer: B



[Watch Video Solution](#)

27. The error in the measurement of the length of a simple pendulum is 0.1% and the error in the time period is 2%. What is the possible percentage of error in the physical quantity having the dimensional formula LT^{-2} ?

- A. 1.1 %

B. 2.1 %

C. 4.1 %

D. 6.1 %

Answer: C



Watch Video Solution

28. Two identical satellites are moving around the Earth in circular orbits at heights $3R$ and R respectively where R is the radius of the Earth. The ratio of their kinetic energies is x . Find x .

A. 2.8 %

B. 0.5 %

C. 1.4 %

D. 3 %

Answer: C



[Watch Video Solution](#)

29. If the length of a cylinder is measured to be 4.28 cm with an error of 0.01 cm. The percentage error in the measured length is nearly

A. 0.4 %

B. 0.5 %

C. 0.2 %

D. 0.1 %

Answer: C



[Watch Video Solution](#)

30. The side of a cube, as measured with a vernier calipers of least count 0.01 cm is 3.00 cm. The maximum possible error in the measurement of volume is

A. $\pm 0.01\text{cm}^3$

B. $\pm 0.06\text{cm}^3$

C. $\pm 0.0\text{cm}^3$

D. $\pm 0.27\text{cm}^3$

Answer: D

 [Watch Video Solution](#)

31. If $L = (20 \pm 0.01)m$ and $B = (10 \pm 0.02)m$ then L/B is

A. $(2 \pm 0.03)m$

B. $(2 \pm 0.015)m$

C. $(2 \pm 0.01)m$

D. $(2 \pm 0.005)m$

Answer: D

 [Watch Video Solution](#)

32. The volume of a sphere is $1.76m^3$ What will be the volume of 25 such spheres taking into account the significant figures.

A. $0.44 \times 10^2 cm^3$

B. $44.0cm^3$

C. $44cm^3$

D. $44.00cm^3$

Answer: B



[Watch Video Solution](#)

33. A body of mass $m = 3.513 \text{ kg}$ is moving along the x-axis with a speed of $5.00ms^{-1}$. The magnitude of its momentum is recorded as

A. $17.6kgms^{-1}$

B. $17.565kgms^{-1}$

C. 17.56kgms^{-1}

D. 17.57kgms^{-1}

Answer: A



[Watch Video Solution](#)

34. If \vec{a} and \vec{b} are two unit vectors and θ is the angle between them, then the unit vector along the angular bisector of \vec{a} and \vec{b} will be given by

A.

B.

C.

D.

Answer: C



[Watch Video Solution](#)

35. Two full turns of the circular scale of a screw gauge cover a distance of 1 mm on its main scale. The total number of division on the circular scale is 50. Further, it is found that the screw gauge has a zero error of -0.03 mm while measuring the diameter of a thin wire, a student notes the main scale reading of 3 mm and the number of circular scale division in line with the main scale as 35. The diameter of the wire is

A. 3.32 mm

B. 3.73 mm

C. 3.67 mm

D. 3.38 mm

Answer: D



Watch Video Solution

36. In a vernier callipers, n divisions of its main scale match with $(n+1)$ divisions on its vernier scale. Each division of the main scale is a units. Using the vernier principle, calculate its least count.

A. $d / (m - 1)$

B. $d / (m + 1)$

C. d / m

D. $md / (m + 1)$

Answer: B



[Watch Video Solution](#)

37. A Vernier callipers has 1mm marks on the main scale . It has 20 equal divisions on the vernier scale , which match with 16 main scale divisions . For this vernier callipers, the least count is

A. 0.02 mm

B. 0.05 mm

C. 0.1 mm

D. 0.2 mm

Answer: D



Watch Video Solution

38. A screw gauge gives the following reading when used to measure the diameter of a wire.

Main scale reading : 0mm

Circular scale reading : 52 divisions

Given that 1mm on main scale corresponds to 100 divisions of the circular scale. the diameter of wire from the above data is :

A. 0.52 cm

B. 0.052 cm

C. 0.026 cm

D. 0.005 cm

Answer: B



[Watch Video Solution](#)

39. The vernier scale of a travelling microscope has 50 divisions which coincide with 49 main scale divisions. If each main scale division is 0.5mm , calculate the minimum inaccuracy in the measurement of distance.

A. 0.01mm

B. 0.1 nm

C. 0.001 mm

D. 1 cm

Answer: A



[Watch Video Solution](#)

40. Time for 20 oscillations of a pendulum is measured as $t_1 = 39.6$ s, $t_2 = 39.9$ s and $t_3 = 39.5$ s. What is the precision in the measurements?

What is the accuracy of the measurement?

- A. 0.1 sec
- B. 0.01 sec
- C. 1 sec
- D. 2 sec

Answer: A

 [Watch Video Solution](#)

41. The measured mass and volume of a body are 53.63 g and 5.8cm^3 respectively, with possible errors of 0.01 g and 0.1cm^3 . The maximum percentage error in density is about

- A. 0.2 %

B. 2 %

C. 5 %

D. 10 %

Answer: B



[Watch Video Solution](#)

42. A Vernier callipers has 1mm marks on the main scale . It has 20 equal divisions on the vernier scale , which match with 16 main scale divisions .

For this vernier callipers, the least count is

A. 0.02 mm

B. 0.05 mm

C. 0.1 mm

D. 0.2 mm

Answer: D



[Watch Video Solution](#)

43. Which of the following numbers has least number of significant figures?

A. 0.80760

B. 0.80200

C. 0.08076

D. 80.267

Answer: C



[Watch Video Solution](#)

44. The number of significant figures in 0.0006032 is

A. 7

B. 2

C. 5

D. 2

Answer: B

 [Watch Video Solution](#)

45. The number of significant figures in 6.320 is

A. 4

B. 2

C. 3

D. 1

Answer: A

 [Watch Video Solution](#)

46. The radius of a circle is 2.12 metre. Its area according to the rule of significant figures is

A. 4.5216cm^2

B. 4.521cm^2

C. 4.52cm^2

D. 4.5cm^2

Answer: D



Watch Video Solution

47. Epistasis and dominance are respectively

A. 5 and 6

B. 5 and 7

C. 2 and 7

D. 2 and 6

Answer: B



Watch Video Solution

48. The mass of a block is 87.2 g and its volume is 25cm^3 . What is its density up to correct significant figures?

A. 3.488gcm^{-3}

B. 3.5gcm^{-3}

C. 3.48gcm^{-3}

D. 3.4gcm^{-3}

Answer: B



Watch Video Solution

49. The length of a rod is measured by different instruments. Of the following the accurate result is

- A. 500 mm
- B. 500.00 mm
- C. 500.0 mm
- D. 0.5 m

Answer: B

 [Watch Video Solution](#)

50. 2.34 is obtained by rounding of the number

- A. 2.346
- B. 2.355
- C. 2.335
- D. 2.334

Answer: C

 [Watch Video Solution](#)

51. When 0.0003125 is reduced to 3 significant figures its value is

A. 0.00312

B. 3.125

C. 0.000312

D. 0.000313

Answer: C



Watch Video Solution

52. Gibbs-Helmholtz equation relates the free energy change to the enthalpy and entropy changes of the process as

$$(\Delta G)_{PT} = \Delta H - T\Delta S$$

The magnitude of ΔH does not change much with the change in temperature but the energy factor $T\Delta S$ changes appreciably. Thus, spontaneity of a process depends very much on temperature.

A reaction has value of $\Delta H = 20\text{kcal}$ at 200K , the reaction is spontaneous, below this temperature, it is not. the values ΔG and ΔS at 200K are, respectively

- A. 15.78 cm
- B. 15.7805 cm
- C. 15.780 cm
- D. 15.8 cm

Answer: D



[Watch Video Solution](#)

53. $9765 \div 14.39 = 678.59625$. This quotient on rounding off to two significant figures is

- A. 680
- B. 70
- C. 678.6

D. 679

Answer: A



[Watch Video Solution](#)

54. The value of $124.2 - 52.487$ with due regard to significant places is

A. 71.7

B. 71.71

C. 72

D. 71

Answer: A



[Watch Video Solution](#)

55. The value of 42×0.041 with due regard to significant figures is

A. 1.722

B. 1.72

C. 1.7

D. 1.8

Answer: C



Watch Video Solution

56. $\sqrt{58.97} =$

A. 7.679

B. 7.68

C. 7.6

D. 7.7

Answer: A



Watch Video Solution

EXERCISE -3

1. The length of a rectangular plate is measured as 10 cm by a vernier scale of least count 0.01 cm and its breadth as 5 cm by the same scale.

The percentage error in area is

- A. 0.1 %
- B. 0.3 %
- C. 0.01 %
- D. 0.05 %

Answer: B



[Watch Video Solution](#)

2. The length of a metallic sheet is measured as 10.0 cm using a metre scale of L.C. 0.1cm and its breadth is, measured as 1.00 cm using a vernier

callipers of L.C. 0.01 cm, the error in area is

A. $\pm 0.01\text{cm}^2$

B. $\pm 0.1\text{cm}^2$

C. $\pm 0.11\text{cm}^2$

D. $\pm 0.2\text{cm}^2$

Answer: D



[Watch Video Solution](#)

3. The mass of a beaker is $(10.1 \pm 0.1)\text{g}$ when empty and $(17.3 \pm 0.1)\text{g}$ when filled with a liquid. The mass of the liquid with possible limits of accuracy is

A. $(7.2 \pm 0.2)\text{g}$

B. $(7.2 \pm 0.1)\text{g}$

C. $(7.1 \pm 0.2)\text{g}$

D. $(7.2 \pm 0.3)g$

Answer: A



[Watch Video Solution](#)

4. The measured mass the volume of a body are 2.42 and 4.7 cm^3 respectively with possible errors 0.01 g , and 0.1 cc. The find the maximum error in density.

- A. 0.2 %
- B. 2 %
- C. 5 %
- D. 2.17 %

Answer: D



[Watch Video Solution](#)

5. When two resistors of (600 ± 3) ohm and (300 ± 6) ohm are connected in parallel, value of the equivalent resistance is

A. $200\text{ohm} \pm 1.5 \%$

B. $200 \text{ ohm} \pm 3.5 \%$

C. $200 \text{ ohm} \pm 9 \%$

D. 200 ohm

Answer: A

 [Watch Video Solution](#)

6. A parabolic wire as shown in the figure is located in x-y plane and carries a current $I=10$ amp. A uniform magnetic field of intensity $2\sqrt{2T}$, making an angle of 45° with x-axis exists throughout the plane. If the coordinates of end point 'P' of wire are $(2m, 1.5m)$ then the total force acting on the wire is:



A. 1.49

B. 1.52

C. 1.51

D. 0.151

Answer: C



Watch Video Solution

7. Two resistors of $10\text{K}\Omega$ and $20\text{K}\Omega$ are connected in series. If tolerance of each resistor is 10% then tolerance of the combination will be

A. 0.05

B. 0.1

C. 0.15

D. 0.2

Answer: B

 [Watch Video Solution](#)

8. Imagine a light planet revolving around a very massive star in a circular orbit of radius r with direction T . On what power of r , will the square of time period depends if the gravitational force of attraction between the planet and the star is proportional to $r^{-5/2}$.

A. 10

B. 20

C. 5

D. 80

Answer: C

 [Watch Video Solution](#)

9. A man in a lift ascending with an upward acceleration a throws a ball vertically upwards with a velocity v with respect to himself and catches it

after t_1 seconds. After wards when the lift is descending with the same acceleration a acting downwards the man again throws the ball vertically upwards with the same velocity with respect to him and catches it after t_2 seconds?

- A. remains the same
- B. is four times
- C. is halved
- D. is reduced by a factor of $1/4$

Answer: D



[Watch Video Solution](#)

10. While measuring the acceleration due to gravity by a simple pendulum, a student makes a positive error of 1% in the length of the pendulum and a negative error of 3% in the value and a of time period. His percentage error in the measurement of g by the relation $g = 4\pi^2(l/T^2)$ will be

A. 0.02

B. 0.04

C. 0.07

D. 0.1

Answer: C



Watch Video Solution

11. The value of escape speed from the surface of earth is

A. 0.02

B. 0.09

C. 0.03

D. 0.12

Answer: B



Watch Video Solution

12. In the measurement of volume of solid sphere using the formula

$$V = \frac{4}{3}\pi r^3$$

if the error committed in the measurement of the radius r is

2%, the percentage error in the volume measurement is

A. 0.03

B. 1.5 %

C. 4.5 %

D. 6 %

Answer: C



[Watch Video Solution](#)

13. A uniform round object of mass M , radius R and moment of inertia about its centre of mass I_{cm} has a light, thin string wrapped several times around its circumference. The free end of string is attached to the ceiling

and the object is released from rest. Find the acceleration of centre of the object and tension in the string. [Take $\frac{I_{cm}}{MR^2} = k$]

A. 0.34 ± 0.01 cm

B. 0.34 ± 0.02 cm

C. 0.34 ± 0.04 cm

D. 0.17 ± 0.01 cm

Answer: D



Watch Video Solution

14. Resistance of a given wire is obtained by measuring the current flowing in it and the voltage difference applied across it. If the percentage errors in the measurement of the current and the voltage difference are 3% each, then error in the value of resistance of the wire is

A. zero

B. 1 %

C. 3 %

D. 6 %

Answer: D



Watch Video Solution

15. In an experiment the value of refractive index of glass was found to be 1.54, 1.53, 1.44, 1.54, 1.56 and 1.45 in successive measurements. Calculate (i) the mean value of refractive index (ii) absolute error of each measurement (iii) mean absolute error (iv) relative error and (v) percentage error.

A. 0.04, 4 %

B. 0.03, 3 %

C. 0.02, 2 %

D. 0.02, 2 %

Answer: B



[Watch Video Solution](#)

16. A physical quantity is represented by $X = M^a L^b T^{-c}$. If the percentage error in the measurement of M, L and T are $\alpha\%$, $\beta\%$ and $\gamma\%$ to respectively, what is the total percentage error in X?

- A. $(a\alpha + b\beta - c\gamma)\%$
- B. $(2a\alpha + b\beta + 3c\gamma)\%$
- C. $(a\alpha - b\beta + c\gamma)\%$
- D. $(a\alpha - b\beta - c\gamma)\%$

Answer: B



[Watch Video Solution](#)

17. In a simple pendulum experiment, length is measured as 31.4 cm with an accuracy of 1mm. The time for 100 oscillations of pendulum is 112.0s with an accuracy of 0.1s. The percentage accuracy in g is

A. 1

B. 1.2

C. 1.8

D. 2.1

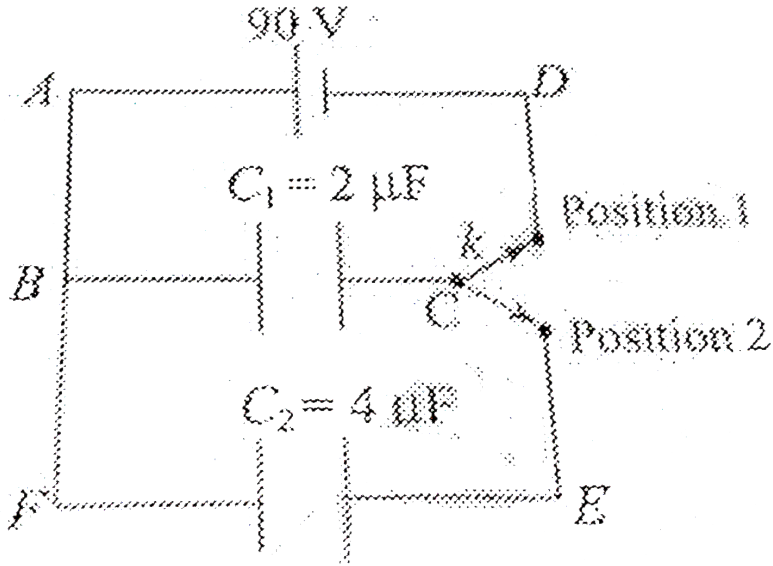
Answer: D



[Watch Video Solution](#)

18. Figure shows two capacitors of capacitance $2\mu F$ and $4\mu F$ and a cell of 90 V. The switch 'k' is such that when it is in position 1, the circuit ABCD is closed and when it is in position 2, the circuit BCEF is closed. The resistance of both the circuits is negligible so that the capacitor gets fully charged instantly. Initially the switch is in position 1. Then it is turned in position 2 and then in position 1. Now two cycles are completed. Find the

charge (in μC) after two cycles.



- A. $(2 \pm 0.13) \mu F$
- B. $(9 \pm 0.18) \mu F$
- C. $(2 \pm 0.09) \mu F$
- D. $(9 \pm 0.09) \mu F$

Answer: B

[▶ Watch Video Solution](#)

19. In an experiment the value of refractive index of glass was found to be 1.54, 1.53, 1.44, 1.54, 1.56 and 1.45 in successive measurements. Calculate (i) the mean value of refractive index (ii) absolute error of each measurement (iii) mean absolute error (iv) relative error and (v) percentage error.

- A. 1.51, 0.04, 0.03, 3 %
- B. 1.51, 0.4, 0.03, 3 %
- C. 15.1, 0.04, 0.03 % , 3 %
- D. 15.1, 0.04, 0.3, 3 %

Answer: A



[Watch Video Solution](#)

20. A rectangular metal slab of mass 33.333 g has its length 8.0 cm, breadth 5.0 cm and thickness 1mm. The mass is measured with accuracy up to 1 mg with a sensitive balance. The length and breadth are

measured with a vernier calipers having a least count of 0.01 cm. The thickness is measured with a screwgauge of least count 0.01 mm. Calculate the percentage accuracy in density from above measurements.

- A. 0.13
- B. 1.3
- C. 1.3 %
- D. 0.16

Answer: C

 [Watch Video Solution](#)

21. The distance covered by a body in time $(30.0 \pm 0.4)\text{m}$ is $(6.0 \pm 0.6)\text{s}$. Calculate the speed of the body. The percentage error in the speed is

 [Watch Video Solution](#)

22. The measured mass and volume of a body are 53.63 g and 5.8cm^3 respectively, with possible errors of 0.01 g and 0.1 cm^3 . The maximum percentage error in density is about

- A. 0.2 %
- B. 2 %
- C. 5 %
- D. 10 %

Answer: B



[Watch Video Solution](#)

23. A student performs an experiment for determination of $g = \frac{4\pi^2 l}{T^2} l \approx 1m$ and the commits an error of "Deltal' For T he takes the time of n oscilations with the stop watch of least count Δt For which of the following data the measurement of g will be most accurate ?

(a) $\Delta L = 0.5\Delta L = 0.1, n = 20$

(B) $\Delta L = 0.5\Delta t = 0.1, n = 50$

(C) $\Delta L = 0.5, \Delta t = 0.02n = 20$ (D) $\Delta L = 0.1\Delta t = 0.05n = 50$.

A. $\Delta = 0.5, \Delta T = 0.1, n = 20$

B. $\Delta L = 0.5, \Delta T = 0.1, n = 50$

C. $\Delta L = 0.5, \Delta T = 0.01, n = 20$

D. $\Delta L = 0.5, \Delta T = 0.05, n = 20$

Answer: D



Watch Video Solution

24. An experiment is performed to obtain the value of acceleration due to gravity g by using a simple pendulum of length L . In this experiment time for 100 oscillations is measured by using a watch of 1 second least count and the value is 90.0 seconds. The length L is measured by using a meter scale of least count 1 mm and the value is 20.0 cm. The error in the determination of g would be:

A. 1.7 %

B. 4.4 %

C. 2.7 %

D. 2.27 %

Answer: C



Watch Video Solution

25. A student measured the diameter of a wire using a screw gauge with least count 0.001 cm and listed the measurements. The correct measurement is -

A. 5.320 cm

B. 5.3 cm

C. 5.32 cm

D. 5.3200 cm

Answer: A



[Watch Video Solution](#)

26. A physical quantity P is related to four observably a, b, c and d as follows $P = a^3 b^3 / c^{1/2} d$. The percentage errors of measurement in a, b, c and d are 1%, 3%, 4% and 2% respectively. What is the percentage error in the quantity P ? If the value of P calculated using the above relation turns out to be 3.763, to what value should you round off the result?

A. 13%, 3.763

B. 13%, 3.76

C. 13%, 3.8

D. 15%, 3.76

Answer: C



[Watch Video Solution](#)

27. The radius of a sphere is 6.01 cm. Its volume to four significant figures is

A. 909.7cm^3

B. 909cm^3

C. 916cm^3

D. 909.67cm^3

Answer: A



[Watch Video Solution](#)

28. The length of a rod is 22.4 m out of it 2.543m is cut out. The remaining length of the rod according to the idea of significant figures is

A. 19.8 m

B. 19.9m

C. 20.0 mn

D. 19.86 m

Answer: B



Watch Video Solution

29. The value of 117.4×0.0025 is

A. 0.2935

B. 0.294

C. 0.3

D. 0.29

Answer: D



Watch Video Solution

30. The sum of the given two numbers with regard to significant figures is

$$(5.0 \times 10^{-8}) + (4.5 \times 10^{-6}) =$$

A. 4.55×10^{-6}

B. 4.5×10^{-6}

C. 4.6×10^{-6}

D. 4×10^{-6}

Answer: C



[Watch Video Solution](#)

31. Find the product of 1.2, 2.54 and 3.257 with due regard to significant figures.

A. 9.934

B. 9.93

C. 9.9

D. 9.9346

Answer: C



[Watch Video Solution](#)

32. A stick has a length of 12.132 cm and another stick has a length of 12.4 cm.

If the two sticks are placed side by side, what is the difference in their lengths ?

A. 2.02 cm

B. 2.0 cm

C. 2 cm

D. 2.055 cm

Answer: B



[Watch Video Solution](#)

33. The length of a rectangular sheet is 1.5cm and breadth is 1.023cm .
Find the area of the face of a rectangular sheet to the correct number of significant figures.

A. 1.8045cm^2

B. 1.804cm^2

C. 1.805cm^2

D. 1.8cm^2

Answer: D



[Watch Video Solution](#)

34. The numbers 2.745 and 2.735 on rounding off to 3 significant figures will give

A. 2.75 and 2.74

B. 2.74 and 2.73

C. 2.75 and 2.73

D. 2.74 and 2.74

Answer: D



Watch Video Solution

35. One metre how many light years

A. 1.057×10^{-15} ly

B. 1.05×10^{-16} ly

C. 1.05×10^{-14} ly

D. 1.057×10^{-17} ly

Answer: B



Watch Video Solution

36. The power of a motor is 200W. If the unit of length is halved, that of mass is doubled and that of time is also doubled, then the power of the motor in the new system is

- A. 3200 W
- B. 3200 new units
- C. 12.5 new units
- D. 12.5 W

Answer: B



[Watch Video Solution](#)

37. In *CGS* system the magnitude of the force is 100 dynes. In another system where the fundamental physical quantities are kilogram , meter , and minute, find the magnitude of the force.

- A. 0.036

B. 0.36

C. 3.6

D. 36

Answer: C



Watch Video Solution

38. The calorie is a unit of heat or energy and it equals about 4.2 J where $1J = 1kgm^2s^{-2}$. Suppose we employ a system of units in which the unit of mass equals α kg, the unit of length equals β m and the unit of time is γ s. Show that the calorie has a magnitude of $4.2\alpha^{-1}\beta^{-2}\gamma^2$ in terms of the new units.

A. $4.2\alpha^2\beta^2\gamma^2$ new units

B. $4.2\alpha^{-1}\beta^{-2}\gamma^2$ new units

C. $\alpha^{-1}\beta^{-2}\gamma^2$ new units

D. $\frac{1}{4.2}\alpha^{-1}\beta^{-2}\gamma^2$ new units

Answer: B



Watch Video Solution

39. If the mass of the electron (9×10^{-31} kg) is taken as unit of mass, the radius of the first Bohr orbit (0.5×10^{-10} m) as unit of length and 500 newton as the unit of force, then the unit of time in the new system would be

A. 3×10^{-22} s

B. 15×10^{-12} s

C. 15×10^{-20} s

D. 45×10^{-20} s

Answer: A



Watch Video Solution

40. If pressure P , velocity of light c and acceleration due to gravity g are chosen as fundamental units, then dimensional formula of mass is

A. Pc^3g^{-4}

B. $Pc^{-4}g^3$

C. Pc^4g^{-3}

D. Pc^4g^3

Answer: C



[Watch Video Solution](#)

41. If young's modulus y , surface tension s and time T are the fundamental quantities then the dimensional formula of density is

A. $s^2y^3t^{-2}$

B. $s^3y^3T^{-2}$

C. $s^{-2}y^3T^2$

D. $s^{-2}y^2T^3$

Answer: C



Watch Video Solution

42. Dimensional analysis of the relation (Energy) = (Pressure difference)^{3/2}(Volume)^{3/2} gives the value of n as

A. 3

B. 2

C. 3/2

D. 1/2

Answer: C



Watch Video Solution

43. If P represents radiation pressure, C speed of light, and Q radiation energy striking unit area per second and x, y, z are non zero integers, then $P^x Q^y C^z$ is dimensionless. The values of x, y and z are respectively

A. 1,1,-1

B. 1,-1,1

C. -1,1,1

D. 1,1,1

Answer: B



[Watch Video Solution](#)

44. If the time period (T) of vibration of a liquid drop depends on surface tension (S), radius (r) of the drop, and density (ρ) of the liquid, then find the expression of T .

A. $T = K \frac{\sqrt{\rho r^3}}{S}$

$$B. T = K \frac{\sqrt{\rho^{1/2} r^3}}{S}$$

$$C. T = K \frac{\sqrt{\rho r^3}}{S^{1/2}}$$

$$D. T = K \sqrt{\frac{\rho^{1/2} r^3}{S}}$$

Answer: C



Watch Video Solution

45. Suppose, the torque acting on a body, is given by $\tau = KL + \frac{MI}{\omega}$

Where L = angular momentum, I = moment of inertia & ω = angular speed

What is the dimensional formula for K & M?

A. time^2

B. time^4

C. time^4

D. time^{-4}

Answer: D

 [Watch Video Solution](#)

46. A force F is given by $F = at + bt^2$, where t is time. The dimensions of a and b are

A. MLT^{-3} and ML^2T^4

B. MLT^{-3} and MLT^{-4}

C. MLT^{-1} and MLT^0

D. MLT^{-4} and MLT^1

Answer: B

 [Watch Video Solution](#)

47. The number of particles crossing a unit area perpendicular to the x -axis in a unit time is given by $n = -D \left(\frac{n_2 - n_1}{x_2 - x_1} \right)$, where n_1 and n_2 are the number of particles per unit volume at

$x = x_1$ and x_2 , respectively, and D is the diffusion constant. The dimensions of D are

A. $M^0 LT^3$

B. $M^0 L^2 T^{-4}$

C. $M^0 LT^{-2}$

D. $M^0 L^2 T^{-1}$

Answer: D



Watch Video Solution

48. Turpentine oil is flowing through a tube of length L and radius r . The pressure difference between the two ends of the tube is p , the viscosity of the oil is given by $\eta = \frac{p(r^2 - x^2)}{4vL}$, where v is the velocity of oil at a distance x from the axis of the tube. From this relation, the dimensions of viscosity η are

A. $[ML^{-1}T^{-1}]$

B. $[MLT^{-1}]$

C. $[ML^2T^{-2}]$

D. $[M^0L^0T^0]$

Answer: A

 [Watch Video Solution](#)

49. The dimensional formula of the product of two physical quantities P and Q is ML^2T^{-2} . The dimensional formula of P/Q is ML^0T^{-2} . Then what are the units of physical quantities P and Q.

A. Force, velocity

B. Momentum, displacement

C. Force, displacement

D. Work, velocity

Answer: C

[Watch Video Solution](#)

50. The potential energy of a particle varies with distance x from a fixed origin as $V = \frac{A\sqrt{X}}{X + B}$ where A and B are constants . The dimension of AB are

A. $M^1 L^{5/2} T^{-2}$

B. $M^1 L^2 T^{-2}$

C. $M^{3/2} L^{5/2} T^{-2}$

D. $M^1 L^{7/2} T^{-2}$

Answer: D

[Watch Video Solution](#)

51. If the displacement y of a particle is $y = A \sin (pt + qx)$, then

A. the dimensions of p are $M^{\circ} L^{\circ} T$

B. the dimensions of q are $M^{\circ} LT^{\circ}$

C. the dimensions of p/q are $M^{\circ} LT^{-1}$

D. the dimensions of pq are $M^{\circ} LT^{-1}$

Answer: C



Watch Video Solution

52. If the displacement y of a particle is $y = A \sin (pt+qx)$ then dimensional formula of pq is

A. L

B. LT^{-1}

C. T^{-1}

D. $L^{-1}T^{-1}$

Answer: C



Watch Video Solution

53. The vander waal's equation for a gas is $\left(p + \frac{a}{V^2}\right)(V - b) = nRT$

where p , V , R , T and n represent the Pressure, Volume, universal gas constant, absolute temperature and number of moles of a gas respectively, where a and b are constants. The ratio $\frac{b}{a}$ will have the

following dimensional formula

A. $M^{-1}L^{-2}T^2$

B. $M^{-1}L^{-1}T^{-1}$

C. ML^2T^2

D. MLT^{-2}

Answer: A



Watch Video Solution

54. If h is the Planck's constant, m = mass of the electron, e = charge of the electron and ϵ_0 = permittivity of vacuum, then $\frac{h^2 \epsilon_0}{me^2}$ has the unit

A. newton

B. joule

C. watt

D. metre

Answer: D



Watch Video Solution

55. A circular railway track of radius r is banked at angle θ so that a train moving with speed v can safely go round the track. A student writes:

$\tan \theta = rg/v^2$. Why this relation is not correct?

- (i) Equality of dimensions does not guarantee correctness of the relation .
- (ii) Dimensionally correct relation may not be numerically correct.
- iii) The relation is dimensionally incorrect.

A. (i)& (ii)

B. (ii) & (iii)

C. (iii) & (i)

D. (i) , (ii) & (iii)

Answer: A



[Watch Video Solution](#)

56. The parameter $\frac{mQ^4}{\epsilon_0^2 h^2}$ has the dimensions of (m = mass Q = charge
 ϵ_0 = Permittivity and h = Planck's constant)

A. Wavelength

B. Power

C. Angular momentum

D. Energy

Answer: D



[Watch Video Solution](#)

57. The dimensions of $\frac{1}{2}\epsilon_0 E^2$ (ϵ_0 is the permittivity of the space and E is electric field), is

A. ML^2T^{-2}

B. MLT^{-2}

C. $ML^{-1}T^{-2}$

D. $ML^{-2}T^{-1}$

Answer: C



[Watch Video Solution](#)

58. If M is the magnetic moment, B is the magnetic induction and T is the time then MBT^2 has the dimensions of

A. Intensity of magnetization

B. Intensity of magnetic field

C. Moment of Inertia

D. Magnetic permeability

Answer: C



[Watch Video Solution](#)

59. A quantity X is given by $\epsilon_0 L \frac{\Delta V}{\Delta t}$ where ϵ_0 is the permittivity of the free space, L is a length ΔV is a potential difference and Δt is a time interval. The dimensional formula for X is the same as that of

A. resistance

B. charge

C. voltage

D. current

Answer: D



[Watch Video Solution](#)

60. In the relation: $P = \frac{\alpha}{\beta} e^{-\frac{\alpha Z}{k\theta}}$, P is pressure Z is distance k is Boltzmann constant and θ is the temperature. The dimensional formula of β will be

A. $M^{\circ} L^{\circ} T^{\circ}$

B. $M^{-1} L^{-1} T^{-1}$

C. $M^{\circ} L^2 T^{\circ}$

D. $M^{-1} L^1 T^2$

Answer: C



Watch Video Solution

61. The length of a pendulum is measured as 1.01 m and time for 30 oscillation is measured as one minute 3 s. Error length is 0.01 m and error in the 3 s. The percentage error in the measurement of acceleration due to gravity is,

A. 1

B. 5

C. 10

D. 15

Answer: C



Watch Video Solution

62. Resistance of a given wire is obtained by measuring the current flowing in it and the voltage difference applied across it. If the percentage errors in the measurement of the current and the voltage difference are 3% each, then error in the value of resistance of the wire is

A. zero

B. 0.01

C. 0.03

D. 0.06

Answer: D



Watch Video Solution

63. In the equation $\left(\frac{1}{p\beta}\right) = \frac{y}{k_B T}$, where p is the pressure, y is the distance, k_B is Boltzmann constant and T is the temperature. Dimensions of β are

A. $M^{-1}L^1T^2$

B. $M^0L^2T^0$

C. $M^1L^{-1}T^{-2}$

D. $M^0L^0T^0$

Answer: B



Watch Video Solution

64. If the time period t of the oscillation of a drop of liquid of density d , radius r , vibrating under surface tension s is given by the formula

$t = \sqrt{r^{2b} s^c d^{a/2}}$. It is observed that the time period is directly proportional to $\sqrt{\frac{d}{s}}$. The value of b should therefore be :

A. $3/4$

B. $\sqrt{3}$

C. $3/2$

D. $2/3$

Answer: C



[Watch Video Solution](#)

65. A student measures the thickness of a human hair using a microscope of magnification 100. He makes 20 observations and find that the average thickness (as viewed in the microscope) is 3.5 mm. What is the estimate of the thickness of hair?

A. 0.5cm

B. 0.035 cm

C. 0.035 mm

D. 3.5 cm

Answer: C

 [Watch Video Solution](#)

66. A physical quantity of the dimension of length that can be formed out of c , G and $\frac{e^2}{4\pi\epsilon_0}$ is [c is velocity of light G is universal constant of gravitation, e is charge

A. $\frac{1}{c} G \frac{e^2}{4\pi \epsilon_0}$

B. $\frac{1}{c^2} \left[G \frac{e^2}{4\pi \epsilon_0} \right]^{1/2}$

C. $c^2 \left[G \frac{e^2}{4\pi \epsilon_0} \right]^{1/2}$

D. $\frac{1}{c^2} \left[\frac{e^2}{G4\pi \epsilon_0} \right]^{1/2}$

Answer: B



Watch Video Solution