



MATHS

BOOKS - CENGAGE

CIRCLES

Single Correct Answer Type

1. If a circle passes through the points where the lines $3kx - 2y - 1 = 0$ and $4x - 3y + 2 = 0$ meet the coordinate axes then $k =$

A. 1

B. -1

C. $\frac{1}{2}$

D. $\frac{-1}{2}$

Answer: C



Watch Video Solution

2. All chords of the curve $x^2 + y^2 - 10x - 4y + 4 = 0$ which make a right angle at (8,-2) pass through

A. (2, 5)

B. (-2, -5)

C. (-5, -2)

D. (5, 2)

Answer: D



Watch Video Solution

3. Let $A(1, 2)$, $B(3, 4)$ be two points and $C(x, y)$ be a point such that area of $\triangle ABC$ is 3 sq. units and $(x - 1)(x - 3) + (y - 2)(y - 4) = 0$. Then number of positions of C , in the xy plane is

A. 2

B. 4

C. 8

D. 0

Answer: D



[View Text Solution](#)

4. The equation of the image of the circle $x^2 + y^2 + 16x - 24y + 183 = 0$ by the line mirror $4x + 7y + 13 = 0$ is :

A. $x^2 + y^2 + 32x - 4y + 235 = 0$

B. $x^2 + y^2 + 32x + 4y - 235 = 0$

C. $x^2 + y^2 + 32x - 4y - 235 = 0$

D. $x^2 + y^2 + 32x + 4y + 235 = 0$

Answer: D



[View Text Solution](#)

5. Equation of circle inscribed in $|x - a| + |y - b| = 1$ is

A. $(x + a)^2 + (y + b)^2 = 2$

B. $(x - a)^2 + (y - b)^2 = \frac{1}{2}$

C. $(x - a)^2 + (y - b)^2 = \frac{1}{\sqrt{2}}$

D. $(x - a)^2 + (y - b)^2 = 1$

Answer: B



[View Text Solution](#)

6. Find the common differences of the following A.P:

2, 4, 6, 8



[Watch Video Solution](#)

7. If a chord of a the circle $x^2 + y^2 = 32$ makes equal intercepts of length of l on the co-ordinate axes, then

A. $l < 8$

B. $l < 16$

C. $l > 8$

D. $l > 16$

Answer: A



[Watch Video Solution](#)

8. P and Q are any two points on the circle $x^2 + y^2 = 4$ such that PQ is a diameter. If α and β are the lengths of

perpendiculars from P and Q on $x + y = 1$ then the maximum value of $\alpha\beta$ is

A. $\frac{1}{2}$

B. $\frac{7}{2}$

C. 1

D. 2

Answer: B

 [Watch Video Solution](#)

9. about to only mathematics

A. 14

B. 15

C. 16

D. none of these

Answer: B



Watch Video Solution

10. about to only mathematics

A. 1

B. 2

C. $\frac{3}{2}$

D. 4

Answer: D

 [Watch Video Solution](#)

11. The circle with equation $x^2 + y^2 = 1$ intersects the line $y = 7x + 5$ at two distinct points A and B. Let C be the point at which the positive x-axis intersects the circle. The angle ACB is

A. $\tan^{-1}\left(\frac{4}{3}\right)$

B. $\tan^{-1}\left(\frac{3}{4}\right)$

C. $\pi/4$

D. $\tan^{-1}\left(\frac{3}{2}\right)$

Answer: C



Watch Video Solution

12. PA and PB are tangents to a circle S touching it at points A and B. C is a point on S in between A and B as shown in the figure. LCM is a tangent to S intersecting PA and PB in S at points L and M, respectively. Then the perimeter of the triangle PLM depends on o

- A. A,B,C and P
- B. P but not on C
- C. P and C only
- D. the radius of S only

Answer: B



Watch Video Solution

13. Two equal chords AB and AC of the circle $x^2 + y^2 - 6x - 8y - 24 = 0$ are drawn from the point $A(\sqrt{33} + 3, 0)$. Another chord PQ is drawn intersecting AB and AC at points R and S, respectively given that $AR = SC = 7$ and $RB = AS = 3$. The value of $P \frac{R}{Q} S$ is

- A. 1
- B. 1.5
- C. 2
- D. None of these

Answer: A

14. From a point P outside a circle with centre at C, tangents PA and PB are drawn such that

$$\frac{1}{(CA)^2} + \frac{1}{(PA)^2} = \frac{1}{16},$$
 then the length of chord AB is

- A. 6
- B. 8
- C. 4
- D. 12

Answer: B



Watch Video Solution

15. $(1, 2\sqrt{2})$ is a point on circle, $x^2 + y^2 = 9$. Which of the following is not the point on the circle at 2 units distance from $(1, 2\sqrt{2})$?

A. $(-1, 2\sqrt{2})$

B. $(2\sqrt{2}, 1)$

C. $\left(\frac{23}{9}, \frac{10\sqrt{2}}{9}\right)$

D. None of these

Answer: B



Watch Video Solution

16. inside the circles $x^2 + y^2 = 1$ there are three circles of equal radius a tangent to each other and to s the value of a equals to

A. $\sqrt{2}(\sqrt{2} - 1)$

B. $\sqrt{3}(2 - \sqrt{3})$

C. $\sqrt{2}(2 - \sqrt{3})$

D. $\sqrt{3}(\sqrt{3} - 1)$

Answer: B



Watch Video Solution

17. If the curves $\frac{x^2}{4} + y^2 = 1$ and $\frac{x^2}{a^2} + y^2 = 1$ for a suitable value of a cut on four concyclic points, the equation of the circle passing through these four points is
(a) $x^2 + y^2 = 2$ (b) $x^2 + y^2 = 1$ (c) $x^2 + y^2 = 4$ (d) none of these

A. $x^2 + y^2 = 2$

B. $x^2 + y^2 = 1$

C. $x^2 + y^2 = 4$

D. none of these

Answer: B



Watch Video Solution

18. AB is a chord of $x^2 + y^2 = 4$ and P(1, 1) trisects AB.

Then the length of the chord AB is (a) 1.5 units (c) 2.5 units

(b) 2 units (d) 3 units

A. 1.5 units

B. 2 units

C. 2.5 units

D. 3 units

Answer: D



Watch Video Solution

19. Find the common differences of the following A.P:

5, 10, 15, 20



[Watch Video Solution](#)

20. Check whether the following sequences are in A.P or not? $x + 3, 2x + 4, 3x + 5, \dots$



[Watch Video Solution](#)

21. Check whether the following sequences are in A.P or not? $z - 1, z - 3, z - 5, \dots$



[Watch Video Solution](#)

22. Q.ys In the xy -plane, the length of the shortest path from $(0,0)$ to $(12,16)$ that does not go inside the circle $(y - 6)^2 + (x - 6)^2 = 36$

8) 25 is (D) 10 (B) 10 5 (A) 10 Dps' on Circle

A. $10\sqrt{3}$

B. $10\sqrt{5}$

C. $10\sqrt{3} + \frac{5\pi}{3}$

D. $10 + 5\pi$

Answer: C



Watch Video Solution

23. Triangle ABC is right angled at A. The circle with centre A and radius AB cuts BC and AC internally at D and E respectively. If BD=20 and DC=16 then the length AC equals
(A) $6\sqrt{21}$ (B) $6\sqrt{26}$ (C) 30 (D) 32

A. $6\sqrt{21}$

B. $6\sqrt{26}$

C. 30

D. 32

Answer: B



[View Text Solution](#)

24. All chords through an external point to the circle $x^2 + y^2 = 16$ are drawn having length l which is a positive integer. The sum of the squares of the distances from centre of circle to these chords is

A. 154

B. 124

C. 172

D. 128

Answer: A



Watch Video Solution

25. If $m(x - 2) + \sqrt{1 - m^2}y = 3$, is tangent to a circle for all $m \in [-1, 1]$ then the radius of the circle is

A. 1.5

B. 2

C. 4.5

D. 3

Answer: D



Watch Video Solution

26. If the line $3x - 4y - \lambda = 0$ touches the circle $x^2 + y^2 - 4x - 8y - 5 = 0$ at (a, b) then which of the following is not the possible value of $\lambda + a + b$?

A. 20

B. -28

C. -30

D. none of these

Answer: C

 [Watch Video Solution](#)

27. The normal at the point (3, 4) on a circle cuts the circle at the point (-1,-2). Then the equation of the circle is

A. $x^2 + y^2 + 2x - 2y - 13 = 0$

B. $x^2 + y^2 - 2x - 2y - 11 = 0$

C. $x^2 + y^2 - 2x + 2y + 12 = 0$

D. $x^2 + y^2 - 2x - 2y + 14 = 0$

Answer: B

 [Watch Video Solution](#)

28. For all values of $m \in R$ the line $y - mx + m - 1 = 0$ cuts the circle $x^2 + y^2 - 2x - 2y + 1 = 0$ at an angle

A. $\frac{\pi}{3}$

B. $\frac{\pi}{6}$

C. $\frac{\pi}{2}$

D. $\frac{\pi}{4}$

Answer: C



[View Text Solution](#)

29. If the line $|y| = x - \alpha$, such that $\alpha > 0$ does not meet the circle $x^2 + y^2 - 10x + 21 = 0$, then α belongs to

A. $(0, 5 - 2\sqrt{2}) \cup (5 + 2\sqrt{2}, \infty)$

B. $(5 - 2\sqrt{2}, 5 + 2\sqrt{2})$

C. $(5 - 2\sqrt{2}, 7)$

D. none of these

Answer: C



[View Text Solution](#)

30. Let C be the circle of radius unity centred at the origin.

If two positive numbers x_1 and x_2 are such that the line passing through $(x_1, -1)$ and $(x_2, 1)$ is tangent to C

then $x_1 \cdot x_2$

A. $x_1 x_2 = 1$

B. $x_1x_2 = -1$

C. $x_1 + x_2 = 1$

D. $4x_1x_2 = 1$

Answer: A



View Text Solution

31. A circle of radius 5 is tangent to the line $4x - 3y = 18$ at $M(3, -2)$ and lies above the line. The equation of the circle is

A. $x^2 + y^2 - 6x + 4y - 12 = 0$

B. $x^2 + y^2 + 2x - 2y - 3 = 0$

C. $x^2 + y^2 + 2x - 2y - 23 = 0$

$$D. x^2 + y^2 + 6x + 4y - 12 = 0$$

Answer: C

 [View Text Solution](#)

32. The line $y = mx$ intersects the circle $x^2 + y^2 - 2x - 2y = 0$ and $x^2 + y^2 + 6x - 8y = 0$ at point A and B (points being other than origin). The range of m such that origin divides AB internally is

A. $-1 < m < \frac{3}{4}$

B. $m > \frac{4}{3}$ or $m < -2$

C. $-2 < m < \frac{4}{3}$

D. $m > -1$

Answer: A



View Text Solution

33. If $C_1: x^2 + y^2 = (3 + 2\sqrt{2})^2$ is a circle and PA and PB are a pair of tangents on C_1 , where P is any point on the director circle of C_1 , then the radius of the smallest circle which touches c_1 externally and also the two tangents PA and PB is $2\sqrt{3} - 3$ (b) $2\sqrt{2} - 1$ $2\sqrt{2} - 1$ (d)

1

A. 1

B. 2

C. 3

D. 4

Answer: A



Watch Video Solution

34. From points on the straight line $3x-4y + 12 = 0$, tangents are drawn to the circle $x^2 + y^2 = 4$. Then, the chords of contact pass through a fixed point. The slope of the chord of the circle having this fixed point as its mid-point is

A. $\frac{4}{3}$

B. $\frac{1}{2}$

C. $\frac{1}{3}$

D. none of these

Answer: D



[View Text Solution](#)

35. If tangent at $(1, 2)$ to the circle $C_1: x^2 + y^2 = 5$ intersects the circle $C_2: x^2 + y^2 = 9$ at A and B and tangents at A and B to the second circle meet at point C, then the co-ordinates of C are given by

A. $(4, 5)$

B. $\left(\frac{9}{15}, \frac{18}{5}\right)$

C. $(4, -5)$

D. $\left(\frac{9}{5}, \frac{18}{5}\right)$

Answer: D



View Text Solution

36. AB is a line segment of length 48 cm and C is its midpoint. If three semicircles are drawn at AB, AC and CB using as diameters, then radius of the circle inscribed in the space enclosed by three semicircles is

A. $3\sqrt{2}$

B. 6

C. 8

D. 10

Answer: C



37. Consider circles

$$C_1: x^2 + y^2 + 2x - 2y + p = 0$$

$$C_2: x^2 + y^2 - 2x + 2y - p = 0$$

$$C_3: x^2 + y^2 = p^2$$

Statement-I: If the circle C_3 intersects C_1 orthogonally then C_2 does not represent a circle

Statement-II: If the circle C_3 intersects C_2 orthogonally then C_2 and C_3 have equal radii Then which of the following is true?

A. statement II is false and statement I is true

B. statement I is false and statement II is true

C. both the statements are false

D. both the statements are true

Answer: B



[View Text Solution](#)

38. Tangents drawn from point of intersection A of circles

$x^2 + y^2 = 4$ and $(x - \sqrt{3})^2 + (y - 3)^2 = 4$ cut the line

joining their centres at B and C Then triangle BAC is

A. equilateral triangle

B. right angle triangle

C. obtuse angle triangle

D. isosceles triangle and $\angle ABC = \frac{\pi}{6}$

Answer: A



[View Text Solution](#)

39. Suppose that two circles C_1 and C_2 in a plane have no points in common. Then

A. there is no line tangent to both C_1 and C_2

B. there are exactly four lines tangent to both C_1 and C_2

C. there are no lines tangent to both C_1 and C_2 or there are exactly two lines tangent to both C_1 and C_2

D. there are no lines tangent to both C_1 and C_2 or
there are exactly four lines tangent to both C_1 and
 C_2

Answer: D

 [Watch Video Solution](#)

40. A circle of radius 2 has its centre at $(2, 0)$ and another circle of radius 1 has its centre at $(5, 0)$. A line is tangent to the two circles at point in the first quadrant. The y -intercept of the tangent line is

A. $\sqrt{2}$

B. $2\sqrt{2}$

C. $3\sqrt{2}$

D. $4\sqrt{2}$

Answer: B



Watch Video Solution

41. Let circle $C_1: x^2 + (y - 4)^2 = 12$ intersects circle $C_2: (x - 3)^2 + y^2 = 13$ at A and B. A quadrilateral ACBD is formed by tangents at A and B to both circles. The diameter of circumcircle of quadrilateral ACBD is

A. 4

B. 5

C. 6

D. 9.25

Answer: B

 [View Text Solution](#)

42. Transverse common tangents are drawn from O to the two circles C_1, C_2 with 4, 2 respectively. Then the ratio of the areas of triangles formed by the tangents drawn from O to the circles C_1 and C_2 and chord of contacts of O w.r.t the circles C_1 and C_2 respectively is

A. 3 units

B. 6 units

C. 4 units

D. 5 units

Answer: C



Watch Video Solution

43. Equation of the straight line meeting the circle with centre at origin and radius equal to 5 in two points at equal distances of 3 units from the point (3,4) is

A. $6x + 8y = 41$

B. $6x - 8y + 41 = 0$

C. $8x + 6y + 41 = 0$

D. $8x - 6y + 41 = 0$

Answer: A

 [Watch Video Solution](#)

44. Two circles touch the x-axis and the line $y = mx$ they meet at (9,6) and at one more point and the product of their radii is $\frac{117}{2}$ then the value of m is

A. $2\sqrt{2}$

B. $\sqrt{2}$

C. $\frac{1}{\sqrt{2}}$

D. none of these

Answer: A

 [View Text Solution](#)

45. Tangents drawn from $P(1, 8)$ to the circle $x^2 + y^2 - 6x - 4y - 11 = 0$ touches the circle at the points A and B, respectively. The radius of the circle which passes through the points of intersection of circles $x^2 + y^2 - 2x - 6y + 6 = 0$ and $x^2 + y^2 - 2x - 6y + 6 = 0$ the circumcircle of the and interse $\triangle PAB$ orthogonally is equal to

A. $\frac{\sqrt{73}}{4}$

B. $\frac{\sqrt{71}}{2}$

C. 3

D. 2

Answer: A



[View Text Solution](#)

46. If the radius of the circle touching the pair of lines

$7x^2 - 18xy + 7y^2 = 0$ and the circle

$x^2 + y^2 - 8x - 8y = 0$, and contained in the given circle

is equal to k , then k^2 is equal to

A. 10

B. 9

C. 8

D. 7

Answer: C



[View Text Solution](#)

47. Equation of a circle having radius equal to twice the radius of the circle $x^2 + y^2 + (2p + 3)x + (3 - 2p)y + p - 3 = 0$ and touching it at the origin is

A. $x^2 + y^2 + 9x - 3y = 0$

B. $x^2 + y^2 - 9x + 3y = 0$

C. $x^2 + y^2 + 18x + 6y = 0$

D. $x^2 + y^2 + 18x - 6y = 0$

Answer: D



[Watch Video Solution](#)

48. Tangents PT_1 , and PT_2 , are drawn from a point P to the circle $x^2 + y^2 = a^2$. If the point P line $Px + qy + r = 0$, then the locus of the centre of circumcircle of the triangle PT_1T_2 is

A. $px + qy = r$

B. $(x - p)^2 + (y - q)^2 = r^2$

C. $px + qy = \frac{r}{2}$

D. $2px + 2qy + r = 0$

Answer: D



View Text Solution

49. An isosceles triangle with base 24 and legs 15 each is inscribed in a circle with centre at $(-1, 1)$. The locus of the centroid of that Δ is

A. $4(x^2 + y^2) + 8x - 8y - 73 = 0$

B. $2(x^2 + y^2) + 4x - 4y - 31 = 0$

C. $2(x^2 + y^2) + 4x - 4y - 21 = 0$

D. $4(x^2 + y^2) + 8x - 8y - 161 = 0$

Answer: D



View Text Solution

50. $x^2 + y^2 = 16$ and $x^2 + y^2 = 36$ are two circles. If P and Q move respectively on these circles such that $PQ = 4$ then the locus of mid-point of PQ is a circle of radius

A. $\sqrt{20}$

B. $\sqrt{22}$

C. $\sqrt{30}$

D. $\sqrt{32}$

Answer: B



Watch Video Solution

51. A variable line moves in such a way that the product of the perpendiculars from $(4, 0)$ and $(0, 0)$ is equal to 9. The locus of the feet of the perpendicular from $(0, 0)$ upon the variable line is a circle, the square of whose radius is

A. 13

B. 15

C. 19

D. 23

Answer: A



Watch Video Solution

52. The locus of the mid-points of the chords of the circle of radius r which subtend an angle $\frac{\pi}{4}$ at any point on the circumference of the circle is a concentric circle with radius equal to

A. $\frac{r}{2}$

B. $\frac{2r}{3}$

C. $\frac{r}{\sqrt{2}}$

D. $\frac{r}{\sqrt{3}}$

Answer: C



Watch Video Solution

53. Tangents PA and PB are drawn to the circle $x^2 + y^2 = 8$ from any arbitrary point P on the line $x + y = 4$. The locus of mid-point of chord of contact AB is

A. $x^2 + y^2 - 2x - 2y = 0$

B. $x^2 + y^2 + 2x + 2y = 0$

C. $x^2 + y^2 - 2x + 2y = 0$

D. $x^2 + y^2 + 2x - 2y = 0$

Answer: A



Watch Video Solution

54. The locus of the centre of a circle which cuts a given circle orthogonally and also touches a given straight line is (a) circle (c) parabola (b) line (d) ellipse

A. circle

B. line

C. parabola

D. ellipse

Answer: C



View Text Solution

55. A circle with radius $|a|$ and center on the y -axis slid along it and a variable line through $(a, 0)$ cuts the circle at points P and Q . The region in which the point of intersection of the tangents to the circle at points P and Q lies is represented by (a) $y^2 \geq 4(ax - a^2)$ (b) $y^2 \leq 4(ax - a^2)$ (c) $y \geq 4(ax - a^2)$ (d) $y \leq 4(ax - a^2)$

A. $y^2 \geq 4a(x - a)$

B. $y^2 \leq 4ax$

C. $x^2 + y^2 \leq 4a^2$

D. $x^2 - y^2 \geq a^2$

Answer: A



Watch Video Solution

56. Find the locus of the point at which two given portions of the straight line subtend equal angle.

A. a straight line

B. a circle

C. a parabola

D. none of these

Answer: B



Watch Video Solution

57. The locus of the centre of the circle which bisects the circumferences of the circles

$$x^2 + y^2 = 4x^2 + y^2 - 2x + 6y + 1 = 0 \text{ is :}$$

A. $2x - 6y - 15 = 0$

B. $2x + 6y + 15 = 0$

C. $2x - 6y + 15 = 0$

D. $2x + 6y - 15 = 0$

Answer: A



[View Text Solution](#)

58. The centre of family of circles cutting the family of circles

$$x^2 + y^2 + 4x \left(\lambda - \frac{3}{2} \right) + 3y \left(\lambda - \frac{4}{3} \right) - 6(\lambda + 2) = 0$$

orthogonally, lies on

A. $x - y - 1 = 0$

B. $4x + 3y - 6 = 0$

C. $4x + 3y + 7 = 0$

D. $3x - 4y - 1 = 0$

Answer: B



[View Text Solution](#)

Multiple Correct Answers Type

1. The line $3x + 6y = k$ intersects the curve $2x^2 + 3y^2 = 1$ at points A and B . The circle on AB as

diameter passes through the origin. Then the value of k^2 is _____

A. 3

B. 4

C. -4

D. -3

Answer: A::D

 [Watch Video Solution](#)

2. Consider the circle $x^2 + y^2 - 8x - 18y + 93 = 0$ with the center C and a point $P(2, 5)$ out side it. From P a pair of tangents PQ and PR are drawn to the circle with S as

mid point of QR. The line joining P to C intersects the given circle at A and B. Which of the following hold (s)

A. CP is the arithmetic mean of AP and BP

B. PR is the geometric mean of PS and PC

C. PS is the harmonic mean of PA and PB

D. The angle between the two tangents from P is

$$\tan^{-1}\left(\frac{4}{3}\right)$$

Answer: A::B::C::D



View Text Solution

3. Consider two circles $C_1: x^2 + y^2 - 1 = 0$ and $C_2: x^2 + y^2 - 2 = 0$. Let A(1,0) be a fixed point on the

circle C_1 and B be any variable point on the circle C_2 . The line BA meets the curve C_2 again at C. Which of the following alternative(s) is/are correct?

A. $OA^2 + OB^2 + BC^2 \in [7, 11]$, where O is the origin

B. $OA^2 + OB^2 + BC^2 \in [4, 7]$, where O is the origin

C. Locus of midpoint of AB is a circle of radius $\frac{1}{\sqrt{2}}$

D. Locus of midpoint of AB is a circle of area $\frac{\pi}{2}$

Answer: A::C

 [View Text Solution](#)

4. The real numbers a and b are distinct. Consider the circles

$$\omega_1 : (x - a)^2 + (y - b)^2 = a^2 + b^2 \text{ and}$$

$$\omega_2 : (x - b)^2 + (y - a)^2 = a^2 + b^2$$

Which of the following is (are) true?

A. The line $y = x$ is an axis of symmetry for the circles

B. The circles intersect at the origin and a point, P(say),

which lies on the line $y = x$

C. The line $y = x$ is the radical axis of the pair of circles.

D. The circles are orthogonal for all $a \neq b$.

Answer: A::B::C



View Text Solution

5. Consider two circles

$$S_1 = x^2 + y^2 + 8x = 0 \text{ and } S_2 = x^2 + y^2 - 2x = 0.$$

Let ΔPOR be formed by the common tangents to circles

S_1 and S_2 , Then which of the following hold(s) good?

A. Incentre of ΔPQR is (1,0)

B. The equation of radical axis of circles S_1 and S_2 is

$$y = 0$$

C. Product of slope of direct common tangents is $\frac{16}{9}$

D. If transverse common tangent intersects direct

common tangents at points A and B, then AB equals

4.

Answer: A::D



[View Text Solution](#)

6. A circle touching the line $x + y - 2 = 0$ at $(1,1)$ and cuts the circle $x^2 + y^2 + 4x + 5y - 6 = 0$ at P and Q. Then

A. PQ can never be parallel to the given line

$$x + y - 2 = 0$$

B. PQ can never be perpendicular to the given line

$$x + y - 2 = 0$$

C. PQ always passes through $(6, -4)$

D. PQ always passes through $(-6, 4)$

Answer: A::B::C



[Watch Video Solution](#)

7. A circle $S = 0$ passes through the common points of family of circles $x^2 + y^2 + \lambda x - 4y + 3 = 0$ and $(\lambda \in R)$ has minimum area then (A) area of $S = 0$ is π sq. units (C) radius of director circle of $S = 0$ is 1 unit (D) $S = 0$ never cuts $|2x| = 1$ (B) radius of director circle of $S = 0$ is $\sqrt{2}$

A. area of $S = 0$ is π sq. units

B. radius of director circle of $S = 0$ is $\sqrt{2}$

C. radius of director circle of $S = 0$ is 1 unit

D. $S = 0$ never cuts $|2x| = 1$

Answer: A::B::D



View Text Solution

8. Q is any point on the circle $x^2 + y^2 = 9$. QN is perpendicular from Q to the x-axis. Locus of the point of trisection of QN is

A. $4x^2 + 9y^2 = 36$

B. $9x^2 + 4y^2 = 36$

C. $9x^2 + y^2 = 9$

D. $x^2 + 9y^2 = 9$

Answer: A::D



View Text Solution

9. Locus of the intersection of the two straight lines passing through $(1, 0)$ and $(-1, 0)$ respectively and including an angle of 45° can be a circle with

- A. centre $(1, 0)$ and radius $\sqrt{2}$
- B. centre $(1, 0)$ and radius 2
- C. centre $(0, 1)$ and radius $\sqrt{2}$
- D. centre $(0, -1)$ and radius $\sqrt{2}$

Answer: C::D



Watch Video Solution

Comprehension Type

1. In the diagram as shown, a circle is drawn with centre $C(1, 1)$ and radius 1 and a line L . The line L is tangential to the circle at Q . Further L meet the y -axis at R and the x -axis at P such a way that the angle OPQ equals θ where $0 < \theta < \frac{\pi}{2}$

A. $(1 + \cos \theta, 1 + \sin \theta)$

B. $(\sin \theta, \cos \theta)$

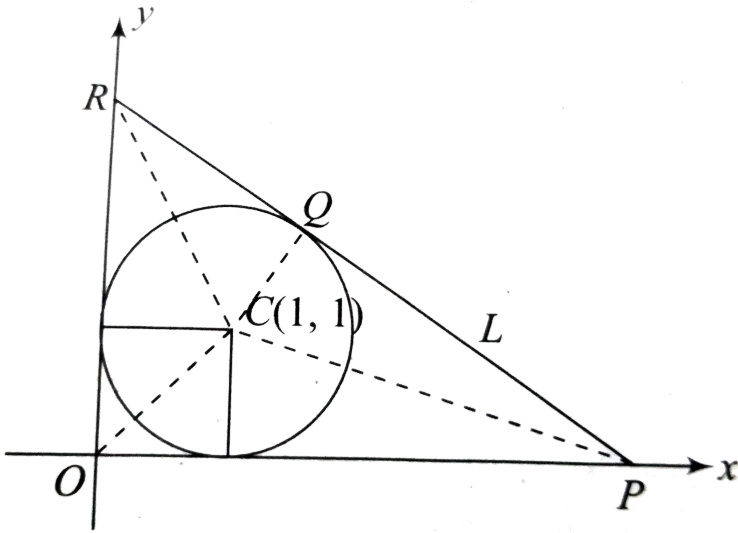
C. $(1 + \sin \theta, \cos \theta)$

D. $(1 + \sin \theta, 1 + \cos \theta)$

Answer: D



View Text Solution



2.

In the diagram as shown, a circle is drawn with centre $C(1, 1)$ and radius 1 and a line L . The line L is tangent to the circle at Q . Further L meets the y -axis at R and the x -axis at P in such a way that the angle OPQ equals θ where

$$0 < \theta < \frac{\pi}{2}.$$

Equation of the line PR is

A. $x \cos \theta + y \sin \theta = \sin \theta + \cos \theta + 1$

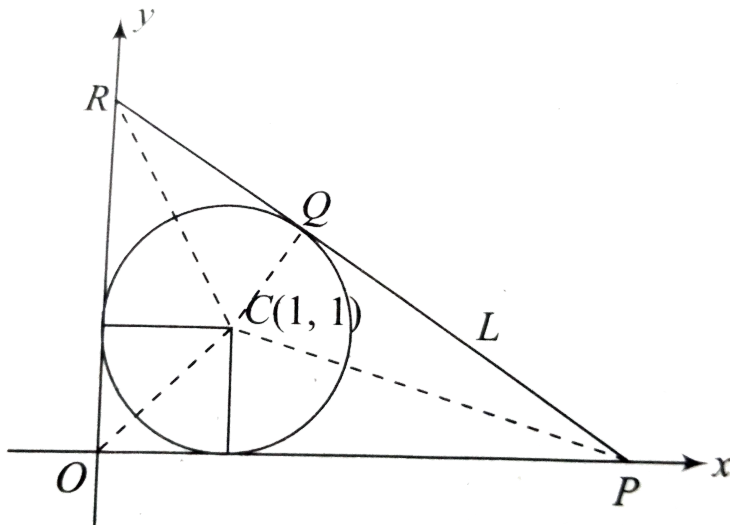
B. $x \sin \theta + y \cos \theta = \cos \theta + \sin \theta - 1$

C. $x \sin \theta + y \cos \theta = \cos \theta + \sin \theta + 1$

D. $x \tan \theta + y = 1 + \cot \left(\frac{\theta}{2} \right)$

Answer: C

 [View Text Solution](#)



3.

In the diagram as shown, a circle is drawn with centre

$C(1, 1)$ and radius 1 and a line L. The line L is tangent to the circle at Q. Further L meets the y-axis at R and the x-axis at P in such a way that the angle OPQ equals θ where $0 < \theta < \frac{\pi}{2}$.

Area of triangle OPR when $\theta = \pi/4$ is

A. $(3 - 2\sqrt{2})$

B. $(3 + 2\sqrt{2})$

C. $(6 + 4\sqrt{2})$

D. none of these

Answer: B



View Text Solution

4. Let $P(\alpha, \beta)$ be a point in the first quadrant. Circles are drawn through P touching the coordinate axes.

Radius of one of the circles is

A. $(\sqrt{\alpha} - \sqrt{\beta})^2$

B. $(\sqrt{\alpha} + \sqrt{\beta})^2$

C. $\alpha + \beta - \sqrt{\alpha\beta}$

D. $\alpha + \beta - \sqrt{2\alpha\beta}$

Answer: D



View Text Solution

5. P is a point (a, b) in the first quadrant. If the two circles which pass through P and touch both the coordinates axes cut at right angles, then $a^2 - 6ab + b^2 = 0$
 $a^2 + 2ab - b^2 = 0$ $a^2 - 4ab + b^2 = 0$ $a^2 - 8ab + b^2 = 0$

A. $\alpha^2 + \beta^2 = 4\alpha\beta$

B. $(\alpha + \beta)^2 = 4\alpha\beta$

C. $\alpha^2 + \beta^2 = \alpha\beta$

D. $\alpha^2 + \beta^2 = 2\alpha\beta$

Answer: A



Watch Video Solution

6. Let $P(\alpha, \beta)$ be a point in the first quadrant. Circles are drawn through P touching the coordinate axes.

Equation of common chord of two circles is

A. $x + y = \alpha - \beta$

B. $x + y = 2\sqrt{\alpha\beta}$

C. $x + y = \alpha + \beta$

D. $\alpha^2 - \beta^2 = 4\alpha\beta$

Answer: C



View Text Solution

7. $P(a, 5a)$ and $Q(4a, a)$ are two points. Two circles are drawn through these points touching the axis of y .

Centre of these circles are at

A. $(a, a), (2a, 3a)$

B. $\left(\frac{205a}{18}, \frac{29a}{3}\right), \left(\frac{5a}{2}, 3a\right)$

C. $\left(3a, \frac{29a}{3}\right), \left(\frac{205a}{9}, \frac{29a}{18}\right)$

D. None of these

Answer: B



View Text Solution

8. Two circles are drawn through the points $(a, 5a)$ and $(4a, a)$ to touch the y-axis. Prove that they intersect at angle $\tan^{-1}\left(\frac{40}{9}\right)$.

A. $\tan^{-1}(4/3)$

B. $\tan^{-1}(40/9)$

C. $\tan^{-1}(84/187)$

D. $\pi/4$

Answer: B



[View Text Solution](#)

1. If $ax + by = 10$ is the chord of minimum length of the circle $(x - 10)^2 + (y - 20)^2 = 729$ and the chord passes through $(5, 15)$ then the value of $(4a + 2b)$ is

 [Watch Video Solution](#)

2. Locus of the point of intersection of the pair of perpendicular tangents to the circles $x^2 + y^2 = 1$ and $x^2 + y^2 = 7$ is the director circle of the circle with radius equal to

 [Watch Video Solution](#)

3. Let AB and CD are two parallel chords of circle whose radius is 5 units. If P and Q are mid points of AB and CD respectively such that $PA \cdot PB = 9$, $QC \cdot QD = 16$, then distance between AB and CD is



[Watch Video Solution](#)

4. about to only mathematics



[Watch Video Solution](#)

5. A straight line l_1 with equation $x - 2y + 10 = 0$ meets the circle with equation $x^2 + y^2 = 100$ at B in the first

quadrant. A line through B perpendicular to l_1 cuts the y -axis at $P(o, t)$. The value of t is 12 (b) 15 (c) 20 (d) 25

 [Watch Video Solution](#)

6. If the tangent at the point P on the circle $x^2 + y^2 + 6x + 6y = 2$ meets the straight line $5x - 2y + 6 = 0$ at a point Q on the y -axis, then the length of PQ is

 [Watch Video Solution](#)

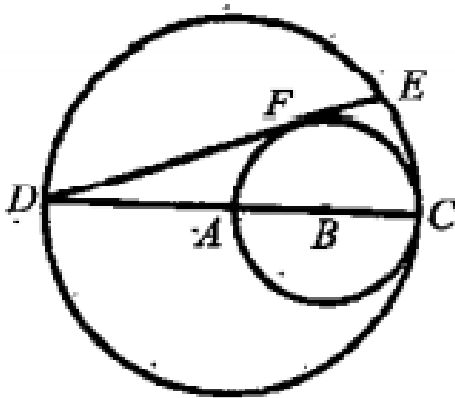
7. The radius of the circle whose two normals are represented by the equation $x^2 - 5xy - 5x + 25y = 0$

and which touches externally the circle

$x^2 + y^2 - 2x + 4y - 4 = 0$ is equal to

[▶ Watch Video Solution](#)

8. If the diagram, DC is a diameter of the large circle centered at A , and AC is a diameter of the smaller circle centered at B . If DE is tangent to the smaller circle at F and $DC = 12$ then the length of DE is



[▶ Watch Video Solution](#)

9. If $2x - 3y = 0$ is the equation of the common chord of the circles, $x^2 + y^2 + 4x = 0$ and $x^2 + y^2 + 2\lambda y = 0$, then the value of λ is

 [Watch Video Solution](#)

10. If one of the diameters of the circle $x^2 + y^2 - 2x - 6y + 6 = 0$ is a chord to the circle with centre at $(2, 1)$ then the radius of the circle is equal to.

 [Watch Video Solution](#)

11. A circle touches the y-axis at the point $(0, 4)$ and cuts the x-axis in a chord of length 6 units. Then find the radius of the circle.

 [Watch Video Solution](#)

12. In the figure given, two circles with centres C_1 and C_2 are 35 units apart, i.e. $C_1C_2 = 35$. The radii of the circles with centres C_1 and C_2 are 12 and 9 respectively. If P is the intersection of C_1C_2 and a common internal tangent to the circles, then $l(C_1P)$ equals

 [Watch Video Solution](#)

13. If the lines $3x - 4y + 4 = 0$ and $6x - 8y - 7 = 0$ are tangents to a circle, then find the radius of the circle.

 [Watch Video Solution](#)

14. The maximum distance of the point $(4,4)$ from the circle

$$x^2 + y^2 - 2x - 15 = 0$$
 is

 [Watch Video Solution](#)

15. If the circle $(x - a)^2 + y^2 = 25$ intersects the circle $x^2 + (y - b)^2 = 16$ in such a way that common chord is of maximum length, then value of $a^2 + b^2$ is

 [Watch Video Solution](#)

16. If a circle $S(x, y) = 0$ touches at the point $(2, 3)$ of the line $x + y = 5$ and $S(1, 2) = 0$, then $(\sqrt{2} \times \text{Radius})$ of such circle is



Watch Video Solution