



PHYSICS

BOOKS - CENGAGE PHYSICS (ENGLISH)

NUCLEAR PHYSICS

Illustration

1. How many electrons protons, and neutrons are there in $12g$ of ${}_6C^{12}$ and in $14g$ of ${}_6C^{14}$?.



[Watch Video Solution](#)

2. a. Find an approximate expression for the mass of a nucleus of mass number A . b. Find an expression for the volume of this nucleus in terms of the mass number. c. Find a numerical value for its density.

 [Watch Video Solution](#)

3. Calculate the radius of ^{70}Ge .

 [Watch Video Solution](#)

4. The most common kind of iron nucleus has a mass number of 56. Find the approximate density of the nucleus.

 [Watch Video Solution](#)

5. Calculate the electric potential energy due to the electric repulsion between two nuclei of ^{12}C when they touch each other at the surface.

 [Watch Video Solution](#)

6. The most abundant isotope of helium has a ${}^4_2\text{He}$ nucleus whose mass is $6.6447 \times 10^{-27} \text{kg}$. For this nucleus, find (a) the mass defect and (b) the binding energy.

Given: Mass of the electron: $m_e = 5.485799 \times 10^{-4}u$, mass of the proton: $m_p = 1.007276u$ and mass of the neutron: $m_n = 1.008665u$.

 [Watch Video Solution](#)

7. The atomic mass ${}^4_2\text{He}$ is $4.0026u$ and the atomic mass of ${}^1_1\text{H}$ is $1.0078u$. Using atomic mass units instead of kilograms, obtain the binding energy of ${}^4_2\text{He}$ nucleus.

 [Watch Video Solution](#)

8. The nucleus of the deuterium atom, called the deuteron, consists of a proton and a neutron. Calculate the deuteron's binding energy, given atomic mass, i.e., the mass of a deuterium nucleus plus an electron is measured to be $2.014102u$.



Watch Video Solution

9. What is the binding energy per nucleon of ${}_6C^{12}$ nucleus?

Given, mass of $C^{12}(m_c) = 12.000u$

Mass of proton (m_p) = $1.0078u$

Mass of neutron (m_n) = $1.0087u$

and $1 \text{ amu} = 931.4 \frac{\text{MeV}}{c^2}$



Watch Video Solution

10. The atomic mass of uranium ${}_{92}^{238}U$ is $238.0508u$, that of throrium

${}_{90}^{234}Th$ is $234.0436u$ and that of an alpha particle ${}_2^4He$ is $4.006u$,

Determine the energy released when α - decay converts ${}_{92}^{238}U$ into

${}_{90}^{234}Th$.



Watch Video Solution

11. The energy released by the α -decay to ${}_{90}^{238}\text{U}$ is found to be 4.3MeV .

Since this energy is carried away as kinetic energy of the recoiling ${}_{90}^{234}\text{Th}$

nucleus and the α -particles, it follows that $KE_{\text{Th}} + KE_{\alpha} = 4.3\text{MeV}$.

However, KE_{Th} and KE_{α} are not equal. Which particle carries away more

kinetic energy, the ${}_{90}^{234}\text{Th}$ nucleus or the α -particles ?



Watch Video Solution

12. The atomic mass of thorium ${}_{90}^{234}\text{Th}$ is $234.04359u$, while that of

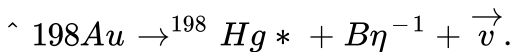
protactinium ${}_{91}^{234}\text{Pa}$ is $234.04330u$. Find the energy released when β

decay changes ${}_{90}^{234}\text{Th}$ into Pa



Watch Video Solution

13. Consider the beta decay



where ${}_{80}^{198}\text{Hg}^*$ represents a mercury nucleus in an excited state at

energy 1.088MeV above the ground state. What can be the maximum

kinetic energy of the electron emitted? The atomic mass of ${}^{198}\text{Au}$ is $197.968233u$ and that of ${}^{198}\text{Hg}$ is $197.966760u$.

 [Watch Video Solution](#)

14. The nuclei ${}_{6}\text{C}^{13}$ and ${}_{7}\text{N}^{14}$ can be described as

 [Watch Video Solution](#)

15. What is the wavelength of the 0.186MeV gamma-ray photon emitted by radium ${}_{88}^{226}\text{Ra}$?

 [Watch Video Solution](#)

16. A radioactive sample has 6.0×10^{18} active nuclei at a certain instant. How many of these nuclei will still be in the same active state after two half-lives?

 [Watch Video Solution](#)

17. The half-life of a radioactive nucleus is 20 hours. What fraction of original activity will remain after 40 hours?

 [Watch Video Solution](#)

18. Suppose 3.0×10^7 radon atoms are trapped in a basement at a given time. The basement is sealed against further entry of the gas. The half-life of radon is 3.83 days. How many radon atoms remain after 31 days?

 [Watch Video Solution](#)

19. Suppose 3.0×10^7 radon atoms are trapped in a basement at a given time. The basement is sealed against further entry of the gas. The half-life of radon is 3.83 days. How many radon atoms remain after 31 days?

 [Watch Video Solution](#)

20. The decay constant for the radioactive nuclide ${}^{64}\text{Cu}$ is $1.516 \times 10^{-5} \text{ s}^{-1}$. Find the activity of a sample containing $1 \mu\text{g}$ of ${}^{64}\text{Cu}$. Atomic weight of copper = 63.5 g mole^{-1} . Neglect the mass difference between the given radioisotope and normal copper.

 [Watch Video Solution](#)

21. The half-life of ${}^{198}\text{Au}$ is 2.7 days . Calculate (a) the decay constant, (b) the average-life and (c) the activity of 1.00 mg of ${}^{198}\text{Au}$. Take atomic weight of ${}^{198}\text{Au}$ to be 198 g mol^{-1} .

 [Watch Video Solution](#)

22. (a) Determine the number of carbon ${}^{14}_6\text{C}$ atoms present for every gram of carbon ${}^{12}_6\text{C}$ in a living organism. Find (b) The decay constant and (c) the activity of this sample.

 [Watch Video Solution](#)

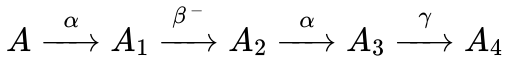
23. The number of ^{238}U atoms in an ancient rock equals the number of ^{206}Pb atoms. The half-life of decay of ^{238}U is 4.5×10^9 years. Estimate the age of the rock assuming that all the ^{206}Pb atoms are formed from the decay of ^{238}U .

 [Watch Video Solution](#)

24. A bottle of red wine is thought to have been sealed about 5years ago. The wine contains a number of different kinds of atoms, including carbon, oxygen, and hydrogen. Each of these has a radioactive isotope. The radioactive isotope of carbon is the familiar $^{14}_6\text{C}$ with a half-life of 5730years . The radioactive isotope of oxygen is $^{15}_8\text{O}$ and has a half-life of 122.2s . The radioactive isotope of hydrogen ^3_1H and is called tritium, its half-life is 12.33years . The activity of each of these isotopes is known at the time the bottle was sealed. However, only one of the isotopes is useful for determining the age of the wine accurately. Which is it?

 [Watch Video Solution](#)

25. A radioactive nucleus undergoes a series of decay according to the scheme.



If the mass number and atomic number of A are 180 and 72 respectively, what are these numbers for A_4 .

 [Watch Video Solution](#)

26. Suppose, the daughter nucleus in a nuclear decay is itself radioactive.

Let λ_p and λ_d be the decay constants of the parent and the daughter nuclei. Also, let N_p and N_d be the number of parent and daughter nuclei at time t . Find the condition for which the number of daughter nuclei becomes constant.

 [Watch Video Solution](#)

27. A radioactive nucleus can decay by two different processes. The half-life for the first process is t_1 and that for the second process is t_2 . Show

that the effective half-life t of the nucleus is given by

$$\frac{1}{t} = \frac{1}{t_1} + \frac{1}{t_2}.$$

 [Watch Video Solution](#)

28. A radioactive nucleus is being produced at a constant rate α per second. Its decay constant is λ . If N_0 are the number of nuclei at time $t = 0$ then maximum number of nuclei possible are

 [Watch Video Solution](#)

29. Nuclei of a radioactive element A are being produced at a constant rate α . The element has a decay constant λ . At time $t = 0$, there are N_0 nuclei of the element.

(a) Calculate the number N of nuclei of A at time t .

(b) If $\alpha = 2N_0\lambda$, calculate the number of nuclei of A after one half-life of A , and also the limiting value of N as $t \rightarrow \infty$.

 [Watch Video Solution](#)

30. The mean lives of an unstable nucleus in two different decay processes are 1620yr and 405yr , respectively. Find out the time during which three-fourth of a sample will decay.

 [Watch Video Solution](#)

31. Find the half-life of uranium, given that $3.32 \times 10^7\text{g}$ radium is found per gram of uranium in old minerals. The atomic weights of uranium and radium are 238 and 226 and half-life of radium is 1600 years (Avogadro number is $6.023 \times 10^{23} / \text{g} - \text{atom}$).

 [Watch Video Solution](#)

32. Find the Q value of the reaction $P + {}^7\text{Li} \rightarrow {}^4\text{He} + {}^4\text{He}$. Determine whether the reaction is exothermic or endothermic. The atomic masses of ${}^1\text{H}$, ${}^4\text{He}$ and ${}^7\text{Li}$ are $1.007825u$, $4.002603u$, and $7.016004u$, respectively.

 [Watch Video Solution](#)

33. Consider a collision between two particles one of which is at rest and the other strikes it head on with momentum P_1 . Calculate the energy of reaction Q in terms of the kinetic energy of the particles before and they collide.

 [Watch Video Solution](#)

34. Two other possible ways by which ${}^{235}\text{U}$ can undergo fission when bombarded with a neutron are (1) by the release of ${}^{140}\text{Xe}$ and ${}^{94}\text{Sr}$ as fission fragments and (2) by the release of ${}^{132}\text{Sn}$ and ${}^{101}\text{Mo}$ as fission fragments. In each case, neutrons are also released. Find the number of neutrons released in each of these events.

 [Watch Video Solution](#)

35. Calculate the amount of energy released in MeV due to a loss of mass of 1 kg.

 [Watch Video Solution](#)

36. On disintegration of one atom of ${}^{235}\text{U}$, the amount of energy obtained is 200MeV . The power obtained in a reactor is 1000 kilo watt. How many atoms are disintegrated per second in the reactor? What is the decay in mass per hour?

 [Watch Video Solution](#)

37. A deuterium reaction that occurs in an experimental fusion reactor is in two stage:

(A) Two deuterium (${}^2_1\text{D}$) nuclei fuse together to form a tritium nucleus, with a proton as a by product written as $\text{D}(\text{D}, \text{p})\text{T}$.

(B) A tritium nucleus fuses with another deuterium nucleus to form a helium ${}^4_2\text{He}$ nucleus with neutron as a by - product, written as $\text{T}(\text{D}, \text{n})$



Compute (a) the energy released in each of the two stages, (b) the energy released in the combined reaction per deuterium. (c) What percentage of the mass energy of the initial deuterium is released. Given,

$${}^2_1\text{D} = 2.014102\text{amu}$$

$${}^3_1\text{T} = 3.016049$$

$${}^4_2\text{He} = 4.002603\text{amu} .$$

$${}^1_1\text{H} = 1.007825\text{amu}$$

$${}^1_0\text{n} = 1.00665\text{amu}$$

 [Watch Video Solution](#)

38. In the process of nuclear fission of 1g uranium, the mass lost is 0.92mg. The efficiency of power house run by the fission reactor is 10 %. To obtain 400 megawatt power from the power house, how much uranium will be required per hour? ($c = 3 \times 10^8 \text{ms}^{-1}$).

 [Watch Video Solution](#)

39. A nuclear reactor using ${}^{235}\text{U}$ generates 250MW of electric power. The efficiency of the reactor (i.e., efficiency of conversion of thermal energy into electrical energy) is 25% . What is the amount of ${}^{235}\text{U}$ used in the reactor per year? The thermal energy released per fission of ${}^{235}\text{U}$ is 200MeV .



[Watch Video Solution](#)

40. In a neutron induced fission of ${}_{92}\text{U}^{235}$ nucleus, usable energy of 185MeV is released if a ${}_{92}\text{U}^{235}$ reactor is continuously operating it at a power level of 100MW how long will it take for 1kg of uranium to be consumed in this reactor?



[Watch Video Solution](#)

41. A nuclear explosive is designed to deliver 1MW power in the form of heat energy. If the explosion is designed with nuclear fuel consisting of

U^{235} to run a reactor at this power level for one year, then the amount of fuel needed is (Given energy per fission is 200 MeV)

 [Watch Video Solution](#)

Solved Examples

1. The disintegration rate of a certain radioactive sample at any instant is 4750 disintegrations per minute. Five minutes later the rate becomes 2700 per minute. Calculate

(a) decay constant and (b) half-life of the sample

 [Watch Video Solution](#)

2. there is a stream of neutrons with a kinetic energy of 0.0327 eV if the half-life of neutrons be 700 s, what fraction of neutrons will decay before they travel a distance of 10m? Mass of neutron equal to $1.67 \times 10^{-27} \text{ kg}$

 [Watch Video Solution](#)

3. The binding energies per nucleon for deuteron (${}_1H^2$) and helium (${}_2He^4$) are 1.1MeV and 7.0MeV respectively. The difference between the binding energy per nucleon of ${}_2He^4$ and ${}_1H^2$ is

 [Watch Video Solution](#)

4. Some amount of a radioactive substance (half-life = 10 days) is spread inside a room and consequently the level of radiation becomes 50 times the permissible level for normal occupancy of the room. After how many days will the room be safe for occupation?

 [Watch Video Solution](#)

5. A small quantity of solution containing Na^{24} radio nuclide of activity 1 microcurie is injected into the blood of a person. A sample of the blood of volume 1cm^3 taken after 5 h shows an activity of 296 disintegration per minute. What will be the total value of the blood in the person? Assume

that the radioactive solution mixes uniformly in the blood of the person.

(Take, 1 curie = 3.7×10^{10} disintegration per second and

$e^{-\lambda t} = 0.7927$, where λ = disintegration constant)



[Watch Video Solution](#)

6. At a given instant there are 25% undecayed radioactive nuclei in a sample. After 10s the number of undecayed nuclei reduces to 12.5%.

Calculate

(a) mean life of the nuclei,

(b) the time in which the number of undecayed nuclei will further reduce to 6.25% of the reduced number.



[Watch Video Solution](#)

7. In an ore containing uranium, the ratio of ^{238}U to ^{206}Pb nuclei is 3.

Calculate the age of the ore, assuming that all the lead present in the ore is the final stable product of ^{238}U . Take the half-life of ^{238}U to be 4.5×10^9 years.



Watch Video Solution

8. The element curium ${}_{96}^{248}\text{Cm}$ has a mean life of 10^{13}s . Its primary decay modes are spontaneous fission and α -decay, the former with a probability of 8% and the later with a probability of 92%, each fission releases 200MeV of energy. The masses involved in decay are as follows

$${}_{96}^{248}\text{Cm} = 248.072220u,$$

$${}_{94}^{244}\text{Pu} = 244.064100u \quad \text{and} \quad {}_2^4\text{He} = 4.002603u.$$

Calculate the power output from a sample of 10^{20} Cm atoms. ($1u = 931\text{MeV}/c^2$)



Watch Video Solution

9. In a nuclear reactor ${}_{92}^{235}\text{U}$ undergoes fission liberating 200MeV of energy. The reactor has a 10% efficiency and produces 1000MW power. If the reactor is to function for 10yr , find the total mass of uranium required.



Watch Video Solution

10. A nucleus at rest undergoes a decay emitting an α particle of de Broglie wavelength $\lambda = 5.76 \times 10^{-15} m$ if the mass of the daughter nucleus is 223.610 amu and that of alpha particle is $4.002 a\mu$, determine the total kinetic energy in the final state Hence, obtain the mass of the parent nucleus in amu ($1 \text{ amu} = 931.470 \text{ MeV} / c^2$)

 [Watch Video Solution](#)

11. A radioactive element decays by $\beta - \text{emission}$. A detector records n beta particles in $2s$ and in next $2s$ it records $0.75n$ beta particles. Find mean life correct to nearest whole number. Given $\ln |2| = 0.6931$, $\ln |3| = 1.0986$.

 [Watch Video Solution](#)

12. In a sample of rock, the ratio of $^{206} \text{Pb}$ to $^{238} \text{U}$ nuclei is found to be 0.5. The age of the rock is (given half-life of U^{238} is 4.5×10^9 years).

 [Watch Video Solution](#)

13. Calculate the energy required to remove the least tightly bound neutron

in ${}_{20}\text{Ca}^{40}$. Given that

$$\text{Mass of } {}_{20}\text{Ca}^{40} = 39.962589 \text{ amu}$$

$$\text{Mass of } {}_{20}\text{Ca}^{39} = 38.970691 \text{ amu}$$

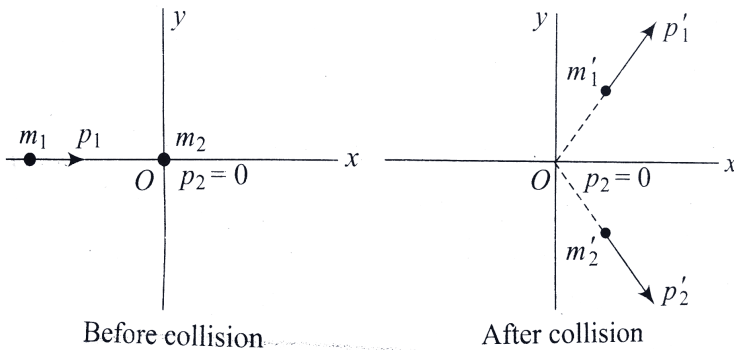
$$\text{Mass of neutron} = 1.008665$$



Watch Video Solution

14. Consider a body at rest in the L-Frame, which explodes into fragments

of masses m_1 and m_2 . Calculate energies of the fragments of the body.



Watch Video Solution

15. (a) Find the energy needed to remove a neutron from the nucleus of the calcium isotope ${}_{20}^{42}\text{Ca}$. (b) Find the energy needed to remove a proton from the nucleus. (c) Why are these energies different?

Given: Mass of ${}_{20}^{40}\text{Ca} = 40.962278u$, mass of neutron $n = 1.007825u$,

Mass of ${}_{20}^{40}\text{Ca} = 40.974599u$, mass of proton $p = 1.007825u$.

 [Watch Video Solution](#)

16. Write the decay equations and expression for the disintegration energy Q of the following decay: β^- decay, electron capture.

 [Watch Video Solution](#)

17. Find whether α decay or any of the β decays are allowed for ${}_{89}^{226}\text{Ac}$.

 [Watch Video Solution](#)

Exercise 5.1

1. How many electron protons and neutrons in a nucleus of atomic number 11 and mass 24?

(i) number of electron = (ii) number of proton = (iii) number of neutrons =

 [Watch Video Solution](#)

2. Calculate the average binding energy per nucleon of ${}_{41}^{93}\text{Nb}$ having mass 92.906 u.

 [Watch Video Solution](#)

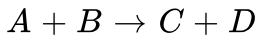
3. Protons and neutrons exist together in an extremely small space within the nucleus. How is this possible when protons repel each other?

 [Watch Video Solution](#)

4. A nucleus has binding energy of 100MeV . It further releases 10MeV energy. Find the new binding energy of the nucleus.

 [Watch Video Solution](#)

5. A nuclear reaction is given as



Binding energies of A , B , C , and D , are given as B_1 , B_2 , B_3 and B_4 .

Find the energy released in the reaction.

 [Watch Video Solution](#)

6. Calculate the binding energy of an alpha particle from the following data:

$$\text{mass of } {}_1^1\text{H atom} = 1.007825u$$

$$\text{mass of neutron} = 1.008665 u$$

$$\text{mass of } {}_4^2\text{He atom} = 4.00260u$$

$$\text{Take } 1u = 931\text{MeVc}^{-2}$$



[Watch Video Solution](#)

7. Find the binding energy of ${}_{26}^{56}\text{Fe}$. Atomic mass of ${}_{26}^{56}\text{Fe}$ is $55.9349u$ and that of ${}^1_1\text{H}$ is $1.00783u$. Mass of neutron = $1.00867u$.



[Watch Video Solution](#)

8. Use Avogadro's number to show that the atomic mass unit is $1\text{ u} = 1.66 \times 10^{-27}\text{ kg}$.



[Watch Video Solution](#)

9. Take a sample of lead and oxygen. They contain different atoms and the density of solid lead is much greater than that of gaseous oxygen. Decide whether the density of the nucleus in a lead atom is greater than, approximately equal to, or less than that in an oxygen atom.



[Watch Video Solution](#)

10. Show that the nuclide ${}^8\text{Be}$ has a positive binding energy but is unstable with respect to decay into two alpha particles, where masses of neutron, ${}^1\text{H}$, and ${}^8\text{Be}$ are 1.008665 u, 1.007825u, and 8.005305u, respectively.

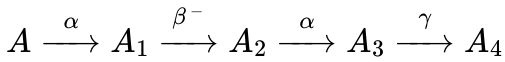
 [Watch Video Solution](#)

Exercise 5.2

1. A uranium nucleus ${}_{92}\text{U}^{238}$ emits an α -particle and a β -particle in succession. The atomic number and mass number of the final nucleus will be

 [Watch Video Solution](#)

2. A radioactive nucleus undergoes a series of decay according to the scheme.



If the mass number and atomic number of A are 180 and 72 respectively, what are these numbers for A_4 .



[Watch Video Solution](#)

3. ${}_{92}\text{U}^{238}$ absorbs a neutron. The product emits an electron. This product further emits an electron. The result is



[Watch Video Solution](#)

4. A uranium nucleus $U - 238$ of atomic number 92 emits two α - particles and two β -particles and transforms into a thorium nucleus. What is the mass number and atomic number of the thorium nucleus so produced?

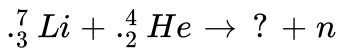


[Watch Video Solution](#)

5. How many electrons protons, and neutrons are there in $12g$ of ${}_6C^{12}$ and in $14g$ of ${}_6C^{14}$?

 [Watch Video Solution](#)

6. Determine the product of the reaction:



What is the Q value of the reaction?

 [Watch Video Solution](#)

7. The half-life of the radioactive radon is 3.8 days. The time, at the end of which $1/20th$ of the radon sample will remain undecayed, is (given $\log_{10} e = 0.4343$)

 [Watch Video Solution](#)

8. In the final Uranium radioactive series the initial nucleus is U_{92}^{238} and the final nucleus is Pb_{82}^{206} . When Uranium nucleus decays to lead, the number of α - particle is And the number of β - particles emitted is

 [Watch Video Solution](#)

9. A radioactive sample has a mass m , decay constant λ , and molecular weight M . If the Avogadro number is N_A , then

(a) find the initial number of nuclei present, (b) find the number of decayed nuclei after a time t , (c) find the activity of the sample after a time t ,

 [Watch Video Solution](#)

10. Calculate the time taken to decay 100 percent of a radioactive sample in terms of (a) half-life T and

(b) mean-life T_{av}

 [Watch Video Solution](#)

11. The activity of a sample of radioactive material is R_1 at time t_1 and R_2 at time t_2 ($t_2 > t_1$). Its mean life is T . Then,

 [Watch Video Solution](#)

12. A ${}_{92}^{238}\text{U}$ undergoes alpha decay. What is the resulting daughter nucleus?

 [Watch Video Solution](#)

13. Is the sulphur isotope ${}_{16}^{38}\text{S}$ likely to be stable?

 [Watch Video Solution](#)

14. Determine the average ${}^{14}\text{C}$ activity in decays per minute per gram of natural carbon found in living organisms if the concentration of ${}^{14}\text{C}$

relative to that of ${}^{12}\text{C}$ is 1.4×10^{-12} and half-life of ${}^{14}\text{C}$ is $T_{1/2} = 57.30$ years.

 [Watch Video Solution](#)

15. Radium 226 is found to have a decay constant of 1.36×10^{-11} Bq.

Determine its half-life in years. If a 200g sample of radium was taken in 1902, how much of it will remain a hundred years later?

 [Watch Video Solution](#)

16. A bottle of red wine is thought to have been sealed about *5years* ago.

The wine contain a number of different kinds of atoms, including carbon, oxygen, and hydrogen. Each of these has a radioactive isotope. The radioactive isotope of carbon is the familiar ${}^{14}_6\text{C}$ with a half-life of *5730years*. The radioactive isotope of oxygen is ${}^{15}_8\text{O}$ and has a half-life of *122.2s*. The radioactive isotope of hydrogen ${}^3_1\text{H}$ and is called tritium, its half-life is *12.33years*. The activity of each of these isotopes is known

at the time the bottle was sealed. However, only one of the isotopes is useful for determining the age of the wine accurately. Which is it?

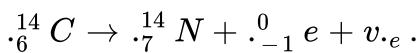
 [Watch Video Solution](#)

17. A radio nuclide A_1 with decay constant λ_1 transforms into a radio nuclide A_2 with decay constant λ_2 . Assuming that at the initial moment, the preparation contained only the radio nuclide A_1

(a) Find the equation describing accumulation of radio nuclide A_2 with time. (b) Find the time interval after which the activity of radio nuclide A_2 reaches its maximum value.

 [Watch Video Solution](#)

18. Consider the beta decay of an unstable ${}^{14}_6\text{C}$ nucleus initially at rest:



Is it possible for the maximum kinetic energy of the emitted beta particle to be exactly equal to Q ?

 [Watch Video Solution](#)

19. The atomic mass of uranium ${}_{92}^{238}U$ is $238.0508u$, that of throrium ${}_{90}^{234}Th$ is $234.0436u$ and that of an alpha particle ${}_{2}^{4}He$ is $4.006u$, Determine the energy released when α - decay converts ${}_{92}^{238}U$ into ${}_{90}^{234}Th$.

 Watch Video Solution

20. Refer to illustration 5.10, the energy released by the α - decay of ${}_{92}^{238}U$ is found to be $4.3MeV$. Since this energy is carried away as kinetic energy of the recoiling ${}_{90}^{234}Th$ nucleus and the α - particles, it follows that $KE_{Th} + KE_{\alpha} = 4.3MeV$. However, KE_{Th} and KE_{α} are not equal. Which particle carries away more kinetic energy, the ${}_{90}^{234}Th$ nucleus or the α - particle? .

 Watch Video Solution

21. Estimate the minimum amount of ${}_{92}^{235}\text{U}$ that needs to undergo fission in order to run a 1000MW power reactor per year of continuous operation. Assume an efficiency of about 33 percent.

 [Watch Video Solution](#)

22. The isotope ${}_{6}^{14}\text{C}$ is radioactive and has a half-life of 5730 years. If you start with a sample of 1000 carbon – 14 nuclei, how many will still be around in 17,190 years?

 [Watch Video Solution](#)

23. The half-life of the radioactive nucleus ${}_{86}^{226}\text{Ra}$ is $1.6 \times 10^3\text{yr}$. If a sample contains 3.0×10^{16} such nuclei, determine the activity at this time.

 [Watch Video Solution](#)

24. Radon, ${}_{86}^{222}\text{Rn}$, is a radioactive gas that can be trapped in the basement of homes, and its presence in high concentrations is a known health hazard. Radon has a half-life of 3.83days . A gas sample contains 4.0×10^8 radon atoms initially.

(a) How many atoms will remain after 12days have passed if no more radon leaks in? (b) What is the initial activity of the radon sample?

 [Watch Video Solution](#)

25. The ${}_{88}^{226}\text{Ra}$ nucleus undergoes α -decay to ${}_{86}^{222}\text{Rn}$. Calculate the amount of energy liberated in this decay. Take the mass of ${}_{88}^{226}\text{Ra}$ to be $226.025402u$, that of ${}_{88}^{226}\text{Rn}$ to be $222.017571u$, and that of ${}_{2}^{4}\text{He}$ to be $4.002602u$.

 [Watch Video Solution](#)

26. Calculate the energy released when three alpha particles combine to form a ${}_{12}\text{C}$ nucleus. The atomic mass of ${}_{4}\text{He}$ is $4.002603u$.



Watch Video Solution

27. (a) Find the energy needed to remove a neutron from the nucleus of the calcium isotope ${}_{20}^{42}\text{Ca}$.

(b) Find the energy needed to remove a proton from this nucleus.

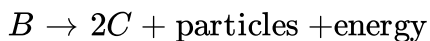
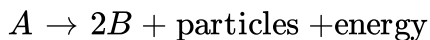
(c) Why are these energies different? Mass of ${}_{20}^{40}\text{Ca} = 40.962278u$, mass of proton = $1.007825u$.



Watch Video Solution

Subjective

1. In a certain hypothetical radioactive decay process, species A decays into species B and species B decays into C according to the reactions



The decay constant for species B is $\lambda_2 = 100s^{-1}$. Initially, 10^4 moles of species of A were present while there was no none of B and C . It was

found that species B reaches its maximum number at a time $t_0 = 21n(10)s$. Calculate the value of maximum number of moles of B .

 [Watch Video Solution](#)

2. ' m_1 ' g of non-radioactive isotopes ${}_z X^A$ are mixed with ' M_2 ' g of the radioactive isotopes ${}_z X^{A'}$. How much will the specific activity decreases ? Half-life of ${}_z X^{A'} = T$ Take N_A as Avagardo number.

 [Watch Video Solution](#)

3. C^{14} disintegrates by β -emission with a reaction energy (Qvalue) of $0.155MeV$. A β -particle with an energy of $0.025MeV$ is emitted in a direction at 135° to the direction of motion of the recoil nucleus. Determine the momneta of the three particles ($\beta^- = \bar{V}, {}^{14}N$) involved in this disintegration in MeV/c units (where c is speed of light in vaccum)

($M_0 = 0.511MeV/c^2$).

 [Watch Video Solution](#)

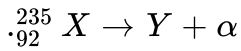
4. A radio nuclide with disintegration constant λ is produced in a reactor at a constant rate α nuclei per second. During each decay energy E_0 is released. 20 % of this energy is utilized in increasing the temperature of water. Find the increase in temperature of m mass of water in time t . Specific heat of water is s . Assume that there is no loss of energy through water surface.

[Watch Video Solution](#)

5. A stable nuclei C is formed from two radioactive nuclei A and B with decay constant of λ_1 and λ_2 respectively. Initially, the number of nuclei of A is N_0 and that of B is zero. Nuclei B are produced at a constant rate of P . Find the number of the nuclei of C after time t .

[Watch Video Solution](#)

6. Suppose a nucleus initially at rest undergoes α decay according to equation



At $t = 0$, the emitted α -particles enter a region of space where a uniform magnetic field $\vec{B} = B_0 \hat{j}$ and electric field $\vec{E} = E_0 \hat{i}$ exist. The α -particle enters in the region with velocity $\vec{V} = v_0 \hat{j}$ from $x = 0$. At time $t = \sqrt{3} \times 10^6 \frac{m_0}{q_0 E_0}$ s, the particle was observed to have speed twice the initial velocity v_0 . Then, find (a) the velocity v_0 of the α -particles, (b) the initial velocity v_0 of the α -particle, (c) the binding energy per nucleon of the α -particle.

[Given that $m(\text{Y}) = 221.03u$, $m(\alpha) = 4.003u$, $m(n) = 1.09u$, $m(p) = 1.007u$.



Watch Video Solution

7. Natural uranium is a mixture of three isotopes ${}_{92}^{234}\text{U}$, ${}_{92}^{235}\text{U}$ and ${}_{92}^{238}\text{U}$ with mass percentage 0.01%, 0.71% and 99.28% respectively. The half-life of three isotopes are $2.5 \times 10^5 \text{yr}$, $7.1 \times 10^8 \text{yr}$ and $4.5 \times 10^9 \text{yr}$

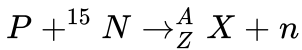
respectively.

Determine the share of radioactivity of each isotope into the total activity of the natural uranium.



[Watch Video Solution](#)

8. A nuclear reaction is given us



(a). Find, A , Z and identify the nucleus X . (b) Find the Q value of the reaction. (c) If the proton were to collide with the ${}^{15}N$ at rest, find the minimum KE needed by the proton to initiate the above reaction. (d) If the proton has twice energy in (c) and the outgoing neutron emerges at an angle of 90° with the direction of the incident proton, find the momentum of the protons and neutrons.

[Given, $m(p) = 1.007825u$, $m({}^{15}C) = 15.0106u$,
 $m({}^{16}N) = 16.0061u$, $m({}^{15}N) = 15.000u$,
 $m({}^{16}O) = 15.9949u$, $m(u) = 1.0086665u$,
 $m({}^{15}O) = 15.0031u$, and $1u \approx 931.5MeV$.]



[Watch Video Solution](#)

9. $(^{239}_{94}\text{Pu})$ is undergoing α - decay according to the equation $^{239}_{94}\text{Pu} \rightarrow (^{235}_{97}\text{U}) + ^4_2\text{He}$. The energy released in the process is mostly kinetic energy of the α -particle. However, a part of the energy is released as γ rays. What is the speed of the emitted α -particle if the γ rays radiated out have energy of 0.90MeV ? Given: Mass of $^{239}_{94}\text{Pu} = 239.05122u$, mass of $(^{235}_{97}\text{U}) = 235.04299u$ and mass of $^4_2\text{He} = 4.002602u$ ($1u = 931\text{MeV}$).

 [Watch Video Solution](#)

10. A tritium gas target is bombarded with a beam of monoenergetic protons of kinetic energy $K_1 = 3\text{MeV}$. The KE of the neutron emitted at 30° to the incident beam is K_2 ? Find the value of K_1/K_2 (approximately in whole number). Atomic masses are $H^1 = 1.007276a\mu$, $n^1 = 1.008665a\mu$, $H^3 = 3.016050a\mu$, $He^3 = 3.016030a\mu$.

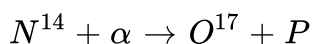
 [Watch Video Solution](#)

11. Consider a nuclear reaction $A + B \rightarrow C$. A nucleus A moving with kinetic energy of 5MeV collides with a nucleus B moving with kinetic energy of 3MeV and forms a nucleus C in excited state. Find the kinetic energy of nucleus C just after its formation if it is formed in a state with excitation energy 10MeV . Take masses of nuclei of A, B and C as $25.0, 10.0, 34.995a\mu$, respectively.

$$(1a\mu = 930\text{MeV}/c^2).$$

 [Watch Video Solution](#)

12. Find the Q value of the reaction



The mass of are, respectively, $14.00307u$, $4.00260u$, and $16.99913u$. Find the total kinetic energy of the products if the striking α particles has the minimum kinetic energy required to initiate the reaction .

 [Watch Video Solution](#)

13. A sample has two isotopes A^{150+} and B having masses $50g$ and $30g$, respectively. A is radioactive and B is stable. A decays to A' by emitting α -particles. The half-life of A is $2h$. Find the mass of the sample after $4h$ and number of α -particles emitted.

 [Watch Video Solution](#)

14. The nucleus ${}^{23}_{10}\text{Ne}$ decays by β -emission into the nucleus ${}^{23}_{11}\text{Na}$. Write down the β -decay equation and determine the maximum kinetic energy of the electrons emitted. Given, $(m({}^{23}_{10}\text{Ne}) = 22.994466\text{amu}$ and $m({}^{23}_{11}\text{Na}) = 22.989770\text{amu}$. Ignore the mass of antineutrino ($\bar{\nu}$).

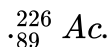
 [Watch Video Solution](#)

15. A radioactive source in the form of a metal sphere of diameter 10^{-3} m emits β -particles at a constant rate of 6.25×10^{10} particles per second. If the source is electrically insulated, how long will it take for its potential

to rise by $1.0V$, assuming that 80% of the emitted β -particles escape the source?

 [Watch Video Solution](#)

16. Find whether α - decay or any of the β - decay are allowed for



 [Watch Video Solution](#)

17. Show that $({}_{26}^{55}\text{Fe})$ may electron capture, but not β^+ decay.

Masses given are $M({}_{26}^{55}\text{Fe}) = 54.938298\text{amu}$,

$M({}_{25}^{55}\text{Mn}) = 54.938050\text{amu}$, $m(e) = 0.000549\text{amu}$.

 [Watch Video Solution](#)

18. A sample of ${}^{18}\text{F}$ is used internally as a medical diagnostic tool to look for the effects of the positron decay ($T_{1/2} = 110\text{ min}$). How long

does it take for 99 % of the ${}^{18}\text{F}$ to decay?



[Watch Video Solution](#)

19. find the binding energy of an α -particle from the following data .

Mass of the helium nucleus $m({}_2\text{He}^4) = 4.001265u$

Mass of neutron $m_n = 1.008666u$

(take , $1u=931.4813\text{ Me V}$)



[Watch Video Solution](#)

20. Assume that a neutron breaks into a proton and an electron. The energy released during this process is (Mass of neutron = 1.6725×10^{-27} kg, mass of proton = 1.6725×10^{-27} kg, mass of electron = 9×10^{-31} kg)



[Watch Video Solution](#)

21. Find the density of ${}_{6}^{12}\text{C}$ nucleus. Take atomic mass of ${}_{6}^{12}\text{C}$ as 12.00amu . Take $R_0 = 1.2 \times 10^{-15}\text{m}$.

 [Watch Video Solution](#)

22. Find the density of ${}_{6}^{12}\text{C}$ nucleus. Take atomic mass of ${}_{6}^{12}\text{C}$ as 12.00amu . Take $R_0 = 1.2 \times 10^{-15}\text{m}$.

 [Watch Video Solution](#)

23. Calculate the binding energy per nucleon for ${}_{10}^{20}\text{Ne}$, ${}_{26}^{56}\text{Fe}$ and ${}_{92}^{238}\text{U}$. Given that mass of neutron is 1.008665amu , mass of proton is 1.007825amu , mass of ${}_{10}^{20}\text{Ne}$ is 19.9924amu , mass of ${}_{26}^{56}\text{Fe}$ is 55.93492amu and mass of ${}_{92}^{238}\text{U}$ is 238.050783amu .

 [Watch Video Solution](#)

24. One gram of a radioactive material having a half-life period of 2 years is kept in store for a duration of 4 years. Calculate how much of the material remains unchanged.

 [Watch Video Solution](#)

25. One gram of a radioactive substance takes 50 to lose 1 centigram. Find its half-life period.

 [Watch Video Solution](#)

26. 1 g of a radioactive substance disintegrates at the rate of 3.7×10^{10} dps, the atomic mass of the substance is 22.6, calculate its mean life.

 [Watch Video Solution](#)

27. there is a stream of neutrons with a kinetic energy of 0.0327 eV if the half-life of neutrons be 700 s, what fraction of neutrons will decay before they travel a distance of 10m? Mass of neutron equal to $1.67 \times 10^{-27} \text{ kg}$



[Watch Video Solution](#)

28. Nuclei of a radioactive element A are being produced at a constant rate α . The element has a decay constant λ . At time $t = 0$, there are N_0 nuclei of the element.

(a) Calculate the number N of nuclei of A at time t .

(b) If $\alpha = 2N_0\lambda$, calculate the number of nuclei of A after one half-life of A , and also the limiting value of N as $t \rightarrow \infty$.



[Watch Video Solution](#)

29. The fission type of warhead of some guided missiles is estimated to be equivalent to 30000 tons of TNT . If $3.5 \times 10^8 \text{ J}$ of energy is released by one tone of exploding TNT , how many fissions occur in the explosions

of warhead? An energy of 200MeV is released by fission of one atom of ${}^{235}\text{U}$.

 [Watch Video Solution](#)

30. find the amount of energy released when 1atom of uranium ${}_{92}\text{U}^{235}$ (235.0439 amu) undergoes fission by slow neutron (1.0087amu) and is splitted into Krypton ${}_{36}\text{Kr}^{92}$ (91.8973 amu) and Barium ${}_{56}\text{b}^{141}$ (140.9139 amu) assuming no energy islost ,hence , find the energy in kWh, when 1g of it undergoes fission .

 [Watch Video Solution](#)

31. In the fission of ${}_{94}^{239}\text{Pu}$ by a thermal neutron, two fission fragmnets of equal masses and sizes are produced and four neutrosn are emitted. Find the force between the two fission fragments at the moment they are produced.

Given : $R_0 = 1.1$ fermi.

 [Watch Video Solution](#)

32. Calculate the excitation energy of the compound nuclei produced when

Given:

$$M({}^{235}\text{U}) = 235.0439\text{amu}, \quad M(n) = 1.0087\text{amu},$$

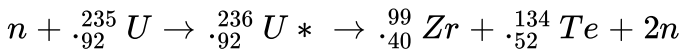
$$M({}^{238}\text{U}) = 238.0508\text{amu}, \quad M({}^{236}\text{U}) = 236.0456\text{amu},$$

$$M({}^{239}\text{U}) = 239.0543\text{amu}$$



Watch Video Solution

33. Calculate the ground state Q value of the induced fission reaction in the equation



If the neutron is thermal. A thermal neutron is in thermal equilibrium with its environment, it has an average kinetic energy given by $(3/2)kT$.

Given :

$$m(n) = 1.0087\text{amu}, \quad M({}^{235}\text{U}) = 235.0439\text{amu},$$

$$M({}^{99}\text{Zr}) = 98.916\text{amu}, \quad M({}^{134}\text{Te}) = 133.9115\text{amu}.$$



Watch Video Solution

34. Show that ${}_{92}^{230}\text{U}$ does not decay by emitting a neutron or proton.

Given:

$$M({}_{92}^{230}\text{U}) = 230.033927\text{amu}, M({}_{92}^{230}\text{U}) = 229.033496\text{amu},$$

$$M({}_{92}^{229}\text{Pa}) = 229.032089\text{amu}, M(n) = 1.008665\text{amu}$$

$$m(p) = 1.007825\text{amu}.$$



Watch Video Solution

35. The nuclear reaction $n + {}_5^{10}\text{B} \rightarrow {}_3^7\text{Li} + {}_2^4\text{He}$ is observed to occur even when very slow-moving neutrons ($M_n = 1.0087\text{amu}$) strike a boron atom at rest. For a particular reaction in which $K_n = 0$, the helium ($M_{\text{He}} = 4.0026\text{amu}$) is observed to have a speed of $9.30 \times 10^6\text{ms}^{-1}$. Determine (a) the kinetic energy of the lithium ($M_{\text{Li}} = 7.0160\text{amu}$) and (b) the Q value of the reaction.



Watch Video Solution

Single Correct Option

1. An element A decays into an element C by a two step process



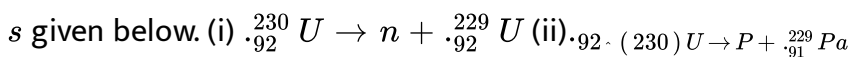
- A. A and C are isotopes
- B. A and C are isobars
- C. B and C are isotopes
- D. A and B are isobars

Answer: a



[Watch Video Solution](#)

2. Consider two arbitrary decay equation and mark the correct alternative



Given:

$$M({}_{92}^{230}U) = 230.033927u, M({}_{92}^{229}U) = 229.03349u, m_n = 1.008665u,$$

$$M({}_{91}^{229}Pa) = 229.032089, m_p = 1.007825, 1 \text{ am u} = 931.5 \text{ MeV}.$$

- A. Only decay (i) is possible.
- B. Only decay (ii) is possible.
- C. Both decay are possible.
- D. Neither of the two decay is possible.

Answer: d



Watch Video Solution

3. In a sample of rock, the ratio of ${}^{206}\text{Pb}$ to ${}^{238}\text{U}$ nuclei is found to be 0.5.

The age of the rock is (given half-life of ${}^{238}\text{U}$ is 4.5×10^9 years).

- A. $2.25 \times 10^9 \text{ year}$
- B. $4.5 \times 10^9 \ln 3 \text{ year}$
- C. $4.5 \times 10^9 \frac{\ln(3)}{\ln 2} \text{ year}$

$$D. 2.25 \times 10^9 \ln\left(\frac{3}{2}\right) \text{ year}$$

Answer: c



Watch Video Solution

4. Let E_1 and E_2 be the binding energies of two nuclei A and B . It is observed that nuclei of A combine together to form a B nucleus. This observation is correct only if .

A. $E_1 > E_2$

B. $E_2 > E_1$

C. $E_2 > 2E_1$

D. nothing can be said

Answer: c



Watch Video Solution

5. A radioactive sample decays by 63 % of its initial value in 10s. It would have decayed by 50 % of its initial value in .

A. 7s

B. 14s

C. 0.7s

D. 1.4s

Answer: a



[Watch Video Solution](#)

6. A nucleus moving with velocity \bar{v} emits an α -particle. Let the velocities of the α -particle and the remaining nucleus be \bar{v}_1 and \bar{v}_2 and their masses be m_1 and (m_2) then,

A. \vec{v} , \vec{v}_1 and \vec{v}_2 must be parallel to each other

B. none of the two of \vec{v} , \vec{v}_1 and \vec{v}_2 should be parallel to each other

C. $\vec{v}_1 + \vec{v}_2$ must be parallel to \vec{v} .

D. $m_1 \vec{v}_1 + m_2 \vec{v}_2$ must be parallel to \vec{v}

Answer: d



Watch Video Solution

7. Which of the following statements is incorrect for nuclear forces?

A. These are strongest in magnitude.

B. They are charge dependent.

C. They are effective only for short ranges.

D. They are from interaction of every nucleon with the nearest limited number of nucleons.

Answer: d



Watch Video Solution

8. A certain radioactive material can undergo three constant λ , 2λ and 3λ . Then, the effective decay constant λ_{eff} is equal to $n\lambda$. What is the value of n ?

A. 6

B. 4

C. 2

D. 3

Answer: a



Watch Video Solution

9. In an α -decay, the kinetic energy of α -particles is $48MeV$ and Q value of the reaction is $50MeV$. The mass number of the mother nucleus is (assume that daughter nucleus is in ground state)

A. 96

B. 100

C. 104

D. none of these

Answer: b



Watch Video Solution

10. A sample of radioactive material decays simultaneously by two processes A and B with half-lives $\frac{1}{2}$ and $\frac{1}{4}h$, respectively. For the first half hour it decays with the process A, next one hour with the process B, and for further half an hour with both A and B. If, originally, there were N_0 nuclei, find the number of nuclei after 2 h of such decay.

A. $\frac{N_0}{(2)^8}$

B. $\frac{N_0}{(2)^4}$

C. $\frac{N_0}{(2)^6}$

D. $\frac{N_0}{(2)^5}$

Answer: a



Watch Video Solution

11. In which of the following processes, the number of protons in the nucleus increase ?

A. α -decay

B. β^- -decay

C. β^+ -decay

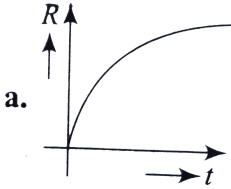
D. K - capture

Answer: b

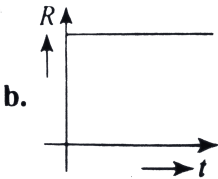


Watch Video Solution

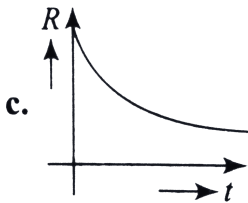
12. A radioactive nucleus X decays to a stable nucleus Y . Then, time graph of rate of formation of Y against time t will be:



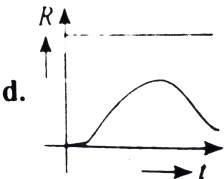
A.



B.



C.



D.

Answer: c



Watch Video Solution

13. A heavy nucleus having mass number 200 gets disintegrated into two small fragments of mass numbers 80 and 120. If binding energy per nucleon for parent atom is 6.5MeV and for daughter nuclei is 7MeV and 8MeV , respectively, then the energy released in the decay will be.

A. 200 MeV

B. (-)220 MeV

C. 220 MeV

D. 180 MeV

Answer: c



Watch Video Solution

14. An element X decays, first by positron emission and then two α -particles are emitted in successive radioactive decay. If the product nucleus

has a mass number 229 and atomic number 89, the mass number and atomic number of element X are.

A. 237, 93

B. 237, 94

C. 221, 84

D. 237, 92

Answer: b



Watch Video Solution

15. 90% of a radioactive sample is left undecayed after time t has elapsed.

What percentage of the initial sample will decay in a total time $2t$

A. 20 %

B. 19 %

C. 40 %

D. 38 %

Answer: b



[Watch Video Solution](#)

16. A radioactive element X converts into another stable element. Y half-life X is 2 h Initially only X is present. After time t, the ratio of atoms of X and Y is found to be 1 : 4 then t in hour is

A. 2

B. 4

C. between 4 and 6

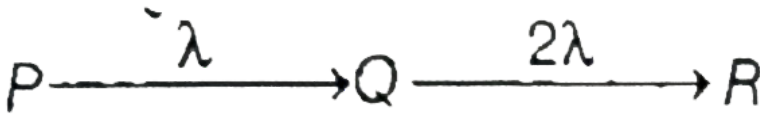
D. 6

Answer: c



[Watch Video Solution](#)

17. A radioactive element P disintegrates into Q which further disintegrates into R as shown in figure.



At $t=0$, number of nuclei of P, Q and R are N_0 , 0 and 0. At time t number of nuclei of P, Q and R are N_1 , N_2 and N_3 respectively. The ratio of N_1 to N_2 maximum is K. Find the value of K.

A. at no time this is possible

B. 2

C. $1/2$

D. $\frac{\ln 2}{2}$

Answer: b



Watch Video Solution

18. The binding energy of an electron in the ground state of He is equal to 24.6eV . The energy required to remove both the electron is

A. 24.6eV

B. 79.0eV

C. 54.4eV

D. none of these

Answer: b



Watch Video Solution

19. The mean life time of a radionuclide, if the activity decrease by 4 % for every $1h$, would be (product is non-radioactive, i.e., stable)

A. $25h$

B. $1.042h$

C. $2h$

D. 30h

Answer: a



[Watch Video Solution](#)

20. On an average, a neutron loses half of its energy per collision with a quasi-free proton. To reduce a $2MeV$ neutron to a thermal neutron having energy $0.04eV$, the number of collisions required is nearly .

A. 50

B. 52

C. 26

D. 15

Answer: c



[Watch Video Solution](#)

21. Masses of two isobars ${}_{29}\text{Cu}^{64}$ and ${}_{30}\text{Zn}^{64}$ are $63.9298u$ and $63.9292u$, respectively. It can be concluded from these data that .

- A. both the isobars are stable
- B. ${}^{64}\text{Zn}$ is radioactive, decaying to ${}^{64}\text{Cu}$ through β - decay
- C. ${}^{64}\text{Cu}$ is radioactive, decaying to ${}^{64}\text{Zn}$ through β -decay
- D. ${}^{64}\text{Cu}$ is radioactive, decaying to ${}^{64}\text{Zn}$ through γ -decay

Answer: c



[Watch Video Solution](#)

22. If a nucleus such as ${}^{226}\text{Ra}$ that is initially at rest undergoes α -decay , then which of the following statements is true?

- A. The alpha particles has more kinetic than the daughter nuclues.
- B. The alpha particle has less kinetic energy than the daughter nucleus.

C. The alpha particle and daughter nucleus both have same kinetic energy

D. We cannot say anything about kinetic energy of alpha particle and daughter nucleus.

Answer: a

 [Watch Video Solution](#)

23. If the Q value of an endothermic reaction is 11.32MeV , then the minimum energy of the reactant nuclei to carry out the reaction is (in laboratory frame of reference)

A. 11.32MeV

B. less than 11.32MeV

C. greater than 11.32MeV

D. Data is insufficient

Answer: c



Watch Video Solution

24. 1.00 kg of ^{235}U undergoes fission process. If energy released per event is 200MeV , then the total energy released is

A. $5.12 \times 10^{24}\text{MeV}$

B. $6.02 \times 10^{23}\text{MeV}$

C. $5.12 \times 10^{16}\text{MeV}$

D. $6.02 \times 10^6\text{MeV}$

Answer: c



Watch Video Solution

25. Mark out the incorrect statement.

- A. A free neutron can transform itself into photon.
- B. A free neutron can transform itself into proton.
- C. In beta minus decay, the electron originates from nucleus.
- D. All of the above

Answer: a

 [Watch Video Solution](#)

26. $U - 235$ can decay by many ways, let us here consider only two ways, A and B . In decay of $U - 235$ by means of A , the energy released per fission is 210MeV while in B it is 186MeV . Then, the uranium 235 sample is more likely to decay by .

- A. scheme A
- B. scheme B
- C. equally likely for both schemes
- D. it depends on half-life of schemes A and B

Answer: a



Watch Video Solution

27. A radio isotope X with a half life 1.4×10^9 yr decays of Y which is stable. A sample of the rock from a cave was found to contain X and Y in the ratio 1 : 7. The age of the rock is

A. 4.2×10^9 years

B. 9.8×10^9 years

C. 1.4×10^9 years

D. 10×10^9 years

Answer: a



Watch Video Solution

28. What is the probability of a radioactive nucleus to survive one mean life?

A. $\frac{1}{e}$

B. $1 - \frac{1}{e}$

C. $\frac{\ln 2}{e}$

D. $1 - \frac{\ln 2}{e}$

Answer: a



Watch Video Solution

29. Consider one of fission reactions of ${}^{235}_{92}\text{U}$ by thermal neutrons

${}^{235}_{92}\text{U} + n \rightarrow {}^{94}_{38}\text{Sr} + {}^{140}_{54}\text{Xe} + 2n$. The fission fragments are however

unstable and they undergo successive β -decay until ${}^{94}_{38}\text{Sr}$ becomes

${}^{94}_{40}\text{Zr}$ and ${}^{140}_{54}\text{Xe}$ becomes ${}^{140}_{58}\text{Ce}$. The energy released in this process is

Given:

$$m({}^{235}\text{U}) = 235.439u, m(n) = 1.00866u, m({}^{94}\text{Zr}) = 93.9064u, m({}^{140}\text{C})$$

A. 156MeV

B. 208MeV

C. 465MeV

D. cannot be computed

Answer: b



Watch Video Solution

30. A star initially has 10^{40} deuterons. It produces energy via the processes ${}^2_1\text{H} + {}^2_1\text{H} \rightarrow {}^3_1\text{H} + p$ and ${}^2_1\text{H} + {}^3_1\text{H} \rightarrow {}^4_2\text{He} + n$, where the masses of the nuclei are

$m({}^2_1\text{H}) = 2.014$ amu, $m(p) = 1.007$ amu, $m(n) = 1.008$ amu and

$m({}^4_2\text{He}) = 4.001$ amu. If the average power radiated by the star is

10^{16}W , the deuteron supply of the star is exhausted in a time of the

order of

A. $10^6 s$

B. $10^8 s$

C. $10^{12} s$

D. $10^{16} s$

Answer: c



Watch Video Solution

31. Two radioactive materials X_1 and X_2 have decay constants 10λ and λ , respectively. If initially they have the same number of nuclei, then the ratio of the number of nuclei of X_1 to that of X_2 will be $1/e$ after a time

(a) $1/10\lambda$ (b) $1/11\lambda$ (c) $11/10\lambda$ (d) $1/9\lambda$

A. $\frac{1}{10\lambda}$

B. $\frac{1}{10\lambda}$

C. $(1)\frac{1}{10\lambda}$

D. $\frac{1}{9\lambda}$

Answer: d



Watch Video Solution

32. A radioactive substance is being produced at a constant rate of 200 nuclei/s. The decay constant of the substance is $1s^{-1}$. After what time the number of radioactive nuclei will become 100? Initially there are no nuclei present.

A. $1s$

B. $\frac{1}{\ln(2)}s$

C. $\ln(2)s$

D. $2s$

Answer: c



Watch Video Solution

33. A radioactive isotope is being produced at a constant rate X Half-life of the radioactive substance is Y After some time the number of radioactive nuclei become constant The value of this constant is

A. $\frac{XY}{\ln(2)}$

B. XY

C. $(XY)\ln(2)$

D. $\frac{X}{Y}$

Answer: a



Watch Video Solution

34. A radioactive substance X decays into another radioactive substance Y Initially only X was present. λ_x and λ_y are the disintegration constants of X and Y N_x and N_y are the number of nuclei of X and Y at any time t . Number of nuclei N_y will be maximum when

A.
$$\frac{N_y}{N_x - N_y} = \frac{\lambda_y}{\lambda_x} - \lambda_y$$

B.
$$\frac{N_y}{N_x - N_y} = \frac{\lambda_y}{\lambda_x} - \lambda_y$$

C. $\lambda_y N_y = \lambda_x N_x$

D. $\lambda_y N_x = \lambda_x N_y$

Answer: c



Watch Video Solution

35. There are two radioactive nuclei A and B A is an alpha emitter and B a beta emitter. Their disintegration constants are in the ratio of atoms of A and B at any time t so that probabilities of getting alpha and beta particles are same at that instant?

A. 2:1

B. 1:2

C. e

D. $re^{-}(1)$

Answer: a



Watch Video Solution

36. Half-life of a radioactive substance A is two times the half-life of another radioactive substance B. Initially the number of nuclei of A and B are N_A and N_B respectively. After three half-lives of A, the number of nuclei of both are equal. Then the ratio N_A / N_B is

A. $1/4$

B. $1/8$

C. $1/3$

D. $1/6$

Answer: b



Watch Video Solution

37. There are two radioactive substances A and B. Decay constant of B is two times that of A. Initially both have equal number of nuclei. After n half-lives of A, rate of disintegration of both are equal. The value of n is

A. 1

B. 2

C. 4

D. All of the above

Answer: a



[Watch Video Solution](#)

38. A radioactive nucleus A finally transforms into a stable nucleus B. Then A and B can be

A. isobars

B. isotones

C. isotopes

D. none of these

Answer: c



Watch Video Solution

39. If ${}_{92}U^{238}$ changes to ${}_{85}At^{210}$ by a series of α and β decays, the number of α and β decays undergone is

A. 7 and 5

B. 7 and 7

C. 5 and 7

D. 7 and 9

Answer: b



Watch Video Solution

40. Number of nuclei of radioactive substance at time $t=0$ are 1000 and 9000 at time $t=2$ s. Then number of nuclei at time $t=4$ s will be

A. 800

B. 810

C. 790

D. 700

Answer: b



Watch Video Solution

41. A radioactive nucleus is being produced at a constant rate α per second. Its decay constant is λ . If N_0 are the number of nuclei at time $t=0$ then, maximum number of nuclei possible are

A. $\frac{\alpha}{\lambda}$

B. $\frac{N_0\alpha}{\lambda}$

C. N_0

D. $\frac{\lambda}{\alpha + N_0}$

Answer: a



Watch Video Solution

42. In a sample of radioactive material , what fraction of the initial number of active nuclei will remain undisintegrated after half of the half life of the sample ?

A. $\frac{1}{\sqrt{2}}$

B. $\frac{1}{2\sqrt{2}}$

C. $\frac{1}{4}$

D. $\frac{1}{\sqrt{2} - 1}$

Answer: a



Watch Video Solution

43. The activity of a radioactive substance is R_1 at time t_1 and R_2 at time t_2 ($t_2 > t_1$) its decay constant is λ Then

A. $R_1 t_1$

B. $R_2 = R_1 e^{\lambda(t_1 - t_2)}$

C. $\frac{R_1 - R_2}{t_2 - t_1} = \text{constant}$

D. $R_2 = R_1 e^{\lambda(t_2 - t_1)}$

Answer: b



Watch Video Solution

44. The activity of a radioactive substance is R_1 at time t_1 and R_2 at time t_2 ($t_2 > t_1$). its decay constant is λ . Then, number of atoms decayed between time interval t_1 and t_2 are

A. $\frac{\ln(2)}{\lambda} (R_1 R_2)$

B. $R_1 e^{-\lambda t_2} - R_2 e^{-\lambda t_2}$

C. $\lambda(R_1 - R_2)$

D. $\left(\frac{R_1 - R_2}{\lambda}\right)$

Answer: d



Watch Video Solution

45. The ratio of molecules mass of two radioactive substances is $\frac{3}{2}$ and the ratio of their decay constant is $\frac{4}{3}$ Then the ratio of their initial activity per mol will be

A. 2

B. $\frac{8}{9}$

C. $\frac{4}{3}$

D. $\frac{9}{8}$

Answer: c



Watch Video Solution

46. N_1 atoms of a radioactive element emit N_2 "beta" particles per second

The decay constant of the element is ($\text{in } s^{-1}$)

A. $\frac{N_1}{N_2}$

B. $\frac{N_2}{N_1}$

C. $N_1 \ln(2)$

D. $N_2 \ln(2)$

Answer: b



Watch Video Solution

47. The binding energies of nuclei X and Y are E_1 and E_2 respectively .

Two atoms of X fuse to give one atom of Y and an energy Q is released.

Then

A. $Q = 2E_1 - E_2$

B. $Q = 2E_2 - 2E_1$

C. $Q < 2E_1 - E_2$

D. $Q > 2E_2 - 2E_1$

Answer: b



Watch Video Solution

48. Binding energy per nucleon of 1^{H^2} and 2^{He^2} are 1.1 MeV and 7.0 respectively Energy realised in the process $1^{H^2} + 1^{He^4}$ is

A. 20.8 MeV

B. 16.6MeV

C. 25.2MeV


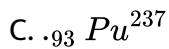
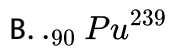
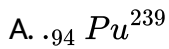
D. 23.6MeV

Answer: d



Watch Video Solution

49. ${}_{92}\text{U}^{238}$ absorbs a neutron. The product emits an electron. This product further emits an electron. The result is



Answer: a



Watch Video Solution

50. The activity of a radioactive element decreases to one third of the original activity I_0 in a period of nine years. After a further lapse of nine years, its activity will be

A. I_0

B. $\frac{2}{3}I_0$

C. $\frac{I_0}{9}$

D. $\frac{I_0}{6}$

Answer: c



Watch Video Solution

51. The half-life of a radioactive decay is x times its mean life. The value of zx is

A. 0.3010

B. 0.6930

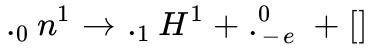
C. 0.6020

D. $\frac{1}{0.6930}$

Answer: b

 [Watch Video Solution](#)

52. Neutron decay in the free space is given follows:



Then, the parenthesis represents

- A. photon
- B. graviton
- C. neutrino
- D. antineutrino

Answer: d

 [Watch Video Solution](#)

53. A nucleus ${}_Z^A X$ emits an α -particle. The resultant nucleus emits a β^+ particle. The respective atomic and mass numbers of the final nucleus will be

A. $Z - 3, A - 4$

B. $Z - 1, A - 4$

C. $Z - 2, A - 4$

D. $Z, A - 2$

Answer: a



Watch Video Solution

54. Certain radioactive substance reduces to 25% of its value in 16 days.

Its half-life is

A. *32days*

B. *8days*

C. *64days*

D. *28days*

Answer: b

 [Watch Video Solution](#)

55. What is the age of an ancient wooden piece if it is known that the specific activity of C^{14} nuclide in it amounts to $3/5$ of that in fresh trees?

Given: the half of C nuclide is 5570years and $\log_e(5/3) = 0.5$.

A. 1000years

B. 2000years

C. 3000years

D. 4000years

Answer: d

 [Watch Video Solution](#)

56. A helium atom, a hydrogen atom and a neutron have masses of $4.003u$, $1.008u$ and $1.009u$ (unified atomic mass units), respectively.

Assuming that hydrogen atoms and neutrons can be fuse to form helium, what is the binding energy of a helium nucleus?

- A. $2.01u$
- B. $3.031u$
- C. $1.017u$
- D. $0.031u$

Answer: d



[Watch Video Solution](#)

57. A certain radioactive element has half-life of 4 days. The fraction of material that decays in 2 days is

- A. $1/2$
- B. $1/(\sqrt{2})$
- C. $(\sqrt{2})$

$$D. (\sqrt{2}) - 1/(\sqrt{2})$$

Answer: d



Watch Video Solution

58. In the disintegration series

${}_{92}^{238}\text{U} \xrightarrow{\alpha} \text{X} \xrightarrow{\beta^-} \text{Y}$ the values of Z and A , respectively, will be

A. 92 , 326

B. 88 , 230

C. 90 , 234

D. 91 , 234

Answer: d



Watch Video Solution

59. Atomic mass number of an element is 232 and its atomic number is 90. The end product of this radioactive element is an isotope of lead (atomic mass 208 and atomic number 82.) The number of α -and β -particles emitted are.

A. 6, 3

B. 6, 4

C. 5, 5

D. 4, 6

Answer: b



[Watch Video Solution](#)

60. The initial activity of a certain radioactive isotope was measured as $16000 \text{ counts min}^{-1}$. Given that the only activity measured was due to this isotope and that its activity after $12h$ was $2100 \text{ counts min}^{-1}$, its half-life, in hours, is nearest to [Given $\log_e(7.2) = 2$].

A. 9.0

B. 6.0

C. 4.0

D. 3.0

Answer: c



Watch Video Solution

61. The minimum frequency of a γ -ray that causes a deuteron to disintegrate into a proton and a neutron is ($m_d = 2.0141\text{amu}$, $m_p = 1.0078\text{amu}$, $m_n = 1.0087\text{amu}$).

A. $2.7 \times 10^{20} \text{ Hz}$

B. $5.4 \times 10^{20} \text{ Hz}$

C. $10.8 \times 10^{20} \text{ Hz}$

D. $21.6 \times 10^{20} \text{ Hz}$

Answer: b



[Watch Video Solution](#)

62. The fission of a heavy nucleus gives, in general, two smaller nuclei, two or three neutrons, some β – particles and some γ – radiation. It is always true that the nuclei produced.

- A. have a total rest-mass that is greater than that of the original nucleus
- B. have large kinetic energies that carry off the greater part of the energy released
- C. travel in exactly opposite directions
- D. have neutron-to-proton ratios that are too low for stability

Answer: b



[Watch Video Solution](#)

63. The activity of a radioactive sample is 1.6 curie, and its half-life is 2.5days. Its activity after 10days will be

A. 0.8curie

B. 0.4curie

C. 0.1curie

D. 0.16curie

Answer: c



Watch Video Solution

64. The rest mass of the deuteron ${}^2_1\text{H}$ is equivalent to an energy of 1876 MeV the rest mass of a proton is equivalent to 939 MeV and that of a neutron is 940 MeV A deuteron may disintegrate to proton and neutron if it :

A. emits an X-ray photon of energy 2MeV

B. captures an X-ray photon of energy $2MeV$

C. emits an X-ray photon of energy $3MeV$

D. captures an X-ray photon of energy $3MeV$

Answer: d



Watch Video Solution

65. A newly prepared radioactive nuclide has a decay constant λ of $10^{-6} s^{-1}$. What is the approximate half-life of the nuclide?

A. *1hour*

B. *1day*

C. *1week*

D. *1month*

Answer: c



Watch Video Solution

66. The half-life of a certain radioactive isotope is $32h$. What fraction of a sample would remain after $16h$?

- A. 0.25
- B. 0.71
- C. 0.29
- D. 0.75

Answer: b



[Watch Video Solution](#)

67. Samples of two radioactive nuclides, X and Y , each have equal activity A at time $t = 0$. X has a half-life of $24years$ and Y a half-life of $16years$. The samples are mixed together. What will be the total activity of the mixture at $t = 48$ years?

A. $\frac{1}{2}A_0$

B. $\frac{1}{4}A_0$

C. $\frac{3}{16}A_0$

D. $\frac{3}{8}A_0$

Answer: d



Watch Video Solution

68. A sample of radioactive element has a mass of $10g$ at an instant $t = 0$.

The approximate mass of this element in the sample after two mean lives is

A. $1.35g$

B. $2.50g$

C. $3.70g$

D. $6.30g$

Answer: a



Watch Video Solution

69. In the case of thorium ($A = 232$ and $Z = 90$), we obtain an isotope of lead ($A = 208$ and $Z = 82$) after some radioactive disintegrations.

The number of α - and β -particles emitted are, respectively,

A. $\alpha = 3, \beta = 3$

B. $\alpha = 6, \beta = 4$

C. $\alpha = 6, \beta = 0$

D. $\alpha = 4, \beta = 6$

Answer: b



Watch Video Solution

70. After an interval of one day , $1/16$ th initial amount of a radioactive material remains in a sample. Then, its half-life is .

A. $6h$

B. $12h$

C. $1.5h$

D. $3h$

Answer: a



[Watch Video Solution](#)

71. The half-life of ^{215}At is $100\mu s$. The time taken for the activity of a sample of ^{215}At to decay to $\frac{1}{16}$ th of its initial value is

A. $400\mu s$

B. $6.3\mu s$

C. $40\mu s$

D. $300\mu s$

Answer: a



Watch Video Solution

72. A stationary thorium nucleus ($A = 200, Z = 90$) emits an alpha particle with kinetic energy E_α . What is the kinetic energy of the recoiling nucleus

A. $\frac{E_\alpha}{108}$

B. $\frac{E_\alpha}{110}$

C. $\frac{E_\alpha}{55}$

D. $\frac{E_\alpha}{54}$

Answer: d



Watch Video Solution

73. The fraction of a radioactive material which remains active after time t is $9/16$. The fraction which remains active after time $t/2$ will be .

A. $\frac{4}{5}$

B. $\frac{7}{8}$

C. $\frac{3}{5}$

D. $\frac{3}{4}$

Answer: d



Watch Video Solution

74. The radioactive decay rate of a radioactive element is found to be 10^3 disintegration per second at a certain time . If the half life of the element is one second , the decay rate after one second is?

A. $500s^{-1}$

B. $1000s^{-1}$

C. $250s^{-1}$

D. $2000s^{-1}$

Answer: a



Watch Video Solution

75. The percentage of quantity of a radioactive material that remains after 5 half-lives will be .

A. 31 %

B. 3.125 %

C. 0.3 %

D. 1 %

Answer: b



Watch Video Solution

76. ${}^{238}\text{U}$ decays with a half-life of 4.5×10^9 years, the decay series eventually ending at ${}^{206}\text{Pb}$, which is stable. A rock sample analysis shows that the ratio of the number of atoms of ${}^{206}\text{Pb}$ to ${}^{238}\text{U}$ is 0.0058. Assuming that all the ${}^{206}\text{Pb}$ is produced by the decay of ${}^{238}\text{U}$ and that all other half-lives on the chain are negligible, the age of the rock sample is ($\ln 1.0058 = 5.78 \times 10^{-3}$).

A. $38 \times 10^8 \text{ years}$

B. $38 \times 10^6 \text{ years}$

C. $19 \times 10^8 \text{ years}$

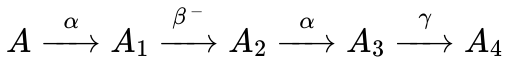
D. $19 \times 10^6 \text{ years}$

Answer: b



Watch Video Solution

77. A radioactive nucleus undergoes a series of decay according to the scheme.



If the mass number and atomic number of A are 180 and 72 respectively, what are these numbers for A_4 .

A. 172 and 69

B. 174 and 70

C. 176 and 69

D. 176 and 70

Answer: a



[Watch Video Solution](#)

78. If 10 % of a radioactive substance decays in every 5 year, then the percentage of the substance that will have decaed in 20*years* will be .

A. 40 %

B. 50 %

C. 65.6 %

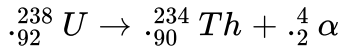
D. 34.4 %

Answer: d



[Watch Video Solution](#)

79. Stationary nucleus ${}_{92}^{238}U$ decays by α emission generating a total kinetic energy T :



What is the kinetic energy of the α -particle?

A. Slightly less than $T/2$

B. $T/2$

C. Slightly less than T

D. Slightly greater than T

Answer: c



[Watch Video Solution](#)

80. The activity of a radioactive element decreases to one-third of the original activity A_0 in a period of 9 years. After a further lapse of 9 years, its activity will be

- A. I_0
- B. $(2/3)I_0$
- C. $(I_0/9)$
- D. $(I_0/6)$

Answer: c



[Watch Video Solution](#)

81. The half-life period of RaB ($_{82}Pb^{214}$) is 26.8 min. The mass of one curie of RaB is

- A. $3.71 \times 10^{10} g$
- B. $3.71 \times 10^{-10} g$

C. $8.61 \times 10^{10} g$

D. $3.064 \times 10^{-8} g$

Answer: d



Watch Video Solution

82. A $5 \times 10^{-4} \text{Å}$ photon produces an electron-positron pair in the vicinity of a heavy nucleus. Rest energy of electron is 0.511MeV . If they have the same kinetic energies, the energy of each particle is nearly

A. 1.2MeV

B. 12MeV

C. 120MeV

D. 1200MeV

Answer: b



Watch Video Solution

83. A freshly prepared radioactive source of half-life 2 h emits radiation of intensity which is 64 times the permissible safe level. The minimum time after which it would be possible to work safely with this source is

A. $6h$

B. $12h$

C. $24h$

D. $128h$

Answer: b



Watch Video Solution

84. Uranium ores contain one radium -226 atom for every 2.8×10^6 uranium -238 atoms. Calculate the half-life of ${}_{88}\text{Ra}^{226}$ is 1600 years (${}_{88}\text{Ra}^{226}$ is a decay product of ${}_{92}\text{U}^{238}$).

A. $1.75 \times 10^3 \text{ years}$

B. $1600 \times \frac{238}{92} \text{years}$

C. $4.5 \times 10^9 \text{years}$

D. $1600 \times 238 \text{years}$

Answer: c



Watch Video Solution

85. Plutonium has atomic mass 210 and a decay constant equal to $5.8 \times 10^{-8} \text{s}^{-1}$. The number of α -particles emitted per second by 1mg plutonium is

(Avogadro's constant = 6.0×10^{23}).

A. 1.7×10^9

B. 1.7×10^{11}

C. 2.9×10^{11}

D. 3.4×10^9

Answer: b



[Watch Video Solution](#)

86. At any instant, the ratio of the amount of radioactive substance is 2 : 1. If their half-lives be respectively, 12 h and 16 h then after 2 days, what will be the ratio of the substances?

A. 1 : 01

B. 2 : 01

C. 1 : 2

D. 1 : 4

Answer: a



[Watch Video Solution](#)

87. Radioactivity of a sample at T_1 time is R_1 and at time T_2 is R_2 . If half-life of sample is T , then in time $(T_2 - T_1)$, the number of decayed atoms is proportional to

A. $R_1 T_1 = R_2 T_2$

B. $R_1 - R_2$

C. $\frac{R_1 - R_2}{T}$

D. $(R_1 - R_2)T$

Answer: d



Watch Video Solution

88. Half-lives of two radioactive substances A and B are respectively 20 min and 40 min. Initially, the samples of A and B have equal number of nuclei. After 80 min the ratio of remaining number of A and B nuclei is

A. 1:16

B. 4:1

C. 1:4

D. 1:1

Answer: c



Watch Video Solution

89. A radioactive nucleus can decay by two different processes. The mean value period for the first process is t_1 and that the second process is t_2 . The effective mean value period for the two processes is .

A. $\frac{t_1 + t_2}{2}$

B. $t_1 + t_2$

C. $\sqrt{t_1 t_2}$

D. $\frac{t_1 + t_2}{t_1 + t_2}$

Answer: d



[Watch Video Solution](#)

90. The half-life of radium is 1620 *years* and its atomic weight is 226. The number of atoms that will decay from its 1g sample per second will be .

A. 3.6×10^{10}

B. 3.6×10^{12}

C. 3.1×10^{15}

D. 31.1×10^{15}

Answer: a



[Watch Video Solution](#)

91. The nuclear radius of a nucleus with nucleon number 16 is $3 \times 10^{-15} m$. Then, the nuclear radius of a nucleus with nucleon number 128 is .

A. $3 \times 10^{-15}m$

B. $1.5 \times 10^{-15}m$

C. $6 \times 10^{-15}m$

D. $4.5 \times 10^{-15}m$

Answer: c



Watch Video Solution

92. The nuclear radius of ${}_{8}O^{16}$ is $3 \times 10^{-15}m$. If an atomic mass unit is $1.67 \times 10^{-27}kg$, then the nuclear density is approximately.

A. $2.35 \times 10^{17}gcm^{-3}$

B. $2.35 \times 10^{17}kgm^{-3}$

C. $2.35 \times 10^{17}gm^{-3}$

D. $2.35 \times 10^{17}kgmm^{-3}$

Answer: b

 [Watch Video Solution](#)

93. What would be the energy required to dissociate completely 1g of $Ca - 40$ into its constituent, particles? Given: Mass of proton = $1.00866amu$,

Mass of neutron = $1.00866amu$,

Mass of $Ca - 40 = 39.97454amu$, (Take $1amu = 931MeV$).

A. $4.813 \times 10^{24} MeV$

B. $4.813 \times 10^{24} eV$

C. $4.813 \times 10^{23} MeV$

D. none of these

Answer: a

 [Watch Video Solution](#)

94. In fission, the percentage of mass converted into energy is about

A. 94 %

B. 1 %

C. 0.1 %

D. 0.01 %

Answer: c



Watch Video Solution

95. In the nuclear reaction ${}_1H^2 + {}_1H^2 \rightarrow {}_2He^3 + {}_0n^1$ if the mass of the deuterium atom = $2.014741amu$, mass of ${}_2He^3$ atom = $3.016977amu$, and mass of neutron = $1.008987amu$, then the Q value of the reaction is nearly .

A. $0.00352MeV$

B. $3.27MeV$

C. $0.82MeV$

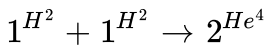
D. $2.45MeV$

Answer: b



[Watch Video Solution](#)

96. Assuming that about 20 MeV of energy is released per fusion reaction



then the mass 1^{H^2} consumed per day in a fusion reactor of power 1 MW will approximately be :

A. 0.001g

B. 0.1g

C. 10.0g

D. 1000g

Answer: b



[Watch Video Solution](#)

97. Assuming that about 200g MeV energy is released per fission of ${}_{92}\text{U}^{235}$ nuclei. What would be the mass of U^{235} consumed per day in the fission of reactor of power 1 MW approximately?

- A. $10^{-2}g$
- B. $1g$
- C. $100g$
- D. $10,000g$

Answer: b



[Watch Video Solution](#)

98. If mass of $\text{U}^{235} = 235.12142a. m. u. ,$ mass of $\text{U}^{236} = 236.1205a\mu,$ and mass of neutron $= 1.008665amu,$ then the energy required to remove one neutron from the nucleus of U^{236} is nearly about.

- A. $75MeV$

B. 6.5MeV

C. 1eV

D. zero

Answer: b



[Watch Video Solution](#)

99. Binding energy per nucleon of 1^{H^2} and 2^{He^2} are 1.1 MeV and 7.0 respectively Energy realised in the process $1^{\text{H}^2} + 1^{\text{He}^4}$ is

A. 13.9MeV

B. 26.9MeV

C. 23.9MeV

D. 19.2MeV

Answer: c



[Watch Video Solution](#)

100. in the fusion reaction ${}_1H^2 + {}_1H^2 \rightarrow {}_2He^3 + {}_0N^1$, are masses of deuteron and neutron expressed in amu are 2.015, 3.017 and 1.0009, respectively, if 1 kg of deuterium undergoes complete fusion, then find the amount of total energy released.

$$1 \text{ amu} = 931.5 \text{ ME V}/c^2.$$

A. $\approx 6.02 \times 10^{13} J$

B. $\approx 5.6 \times 10^{13} J$

C. $\approx 9.0 \times 10^{13} J$

D. $\approx 0.9 \times 10^{13} J$

Answer: c



Watch Video Solution

101. The half-life of radium is 1500years. In how many years will 1g of pure radium be reduced to one centigram?

A. $3.927 \times 10^2 \text{ years}$

B. $9.927 \times 10^2 \text{ years}$

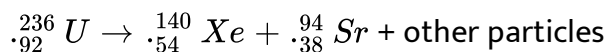
C. $99.927 \times 10^2 \text{ years}$

D. $0.927 \times 10^2 \text{ years}$

Answer: b

 [Watch Video Solution](#)

102. The compound unstable nucleus ${}_{92}^{236}\text{U}$ often decays in accordance with the following reaction



During the reaction, the uranium nucleus "fissions" (splits) into the two smaller nuclei which have higher nuclear binding energy per nucleon (although the lighter nuclei have lower total nuclear binding energies, because they contain fewer nucleons).

Inside a nucleus, the nucleons (protons and neutrons) attract each other with a "strong nuclear" force. All nucleons exert approximately the same

strong nuclear force on each other. This force holds the nucleons very close together at intranuclear distances.

A proton and a neutron are both shot at 100ms^{-1} toward a ${}^{12}_6\text{C}$ nucleus. Which particle, if either, is more likely to be absorbed by the nucleus?

- A. The proton
- B. The neutron
- C. Both particles are about equally likely to be absorbed.
- D. Neither particle will be absorbed.

Answer: b

 [Watch Video Solution](#)

103. A container is filled with a radioactive substance for which the half-life is 2days . A week later, when the container is opened, it contains 5g of the substance. Approximately how many grams of the substance were initially placed in the container?

A. 40

B. 60

C. 80

D. 100

Answer: c



Watch Video Solution

104. The half - life of ^{131}I is 8 days. Given a sample of ^{131}I at time $t = 0$, we can assert that

A. no nucleus will decay before $t = 4\text{days}$

B. no nucleus will decay before $t = 8\text{days}$

C. all nucleus will decay before $t = 16\text{days}$

D. a given nucleus may decay at any time after $t = 0$.

Answer: d

 [Watch Video Solution](#)

105. When an atom undergoes β^- decay

- A. a neutron changes into a proton
- B. a proton changes into a neutron
- C. a neutron changes into an antiproton
- D. a proton changes into an antineutron

Answer: b

 [Watch Video Solution](#)

106. The nucleus of the deuterium atom, called the deuteron, consists of a proton and a neutron. Calculate the deuteron's binding energy, given atomic mass, i.e., the mass of a deuterium nucleus plus an electron is measured to be $2.014102u$.

A. 0.002388MeV

B. 2.014102MeV

C. 2.16490MeV

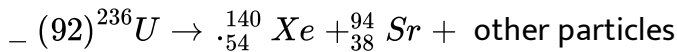
D. 2.224MeV

Answer: d



Watch Video Solution

107. The compound unstable nucleus ${}_{92}^{236}\text{U}$ often decays in accordance with the following reaction



During the reaction, the uranium nucleus "fissions" (splits) into the two smaller nuclei which have higher nuclear binding energy per nucleon (although the lighter nuclei have lower total nuclear binding energies, because they contain fewer nucleons).

Inside a nucleus, the nucleons (protons and neutrons) attract each other with a "strong nuclear" force. All nucleons exert approximately the same

strong nuclear force on each other. This force holds the nuclear are very close together at intranuclear distances.

In the nuclear reaction presented above, the "other particles" might be .

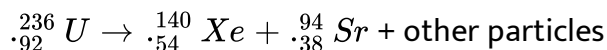
- A. An alpha particle, which consists of two protons and two neutrons
- B. two protons
- C. one proton and one neutron
- D. two neutrons

Answer: d



[Watch Video Solution](#)

108. The compound unstaebel nucleus ${}_{92}^{236}U$ often decays in accordance with the following reaction



During the reaction, the uranium nucleus "fissions" (splits) into the two smaller nuclei have higher nuclear binding energy per nucleon (although the lighter nuclei have lower total nuclear binding energies, because they

contain fewer nucleons).

Inside a nucleus, the nucleons (protons and neutrons) attract each other with a "strong nuclear" force. All neutrons exert approximately the same strong nuclear force on each other. This force holds the nucleons very close together at intranuclear distances.

Why is a ${}^4_2\text{He}$ nucleus more stable than a ${}^4_3\text{Li}$ nucleus?

- A. The strong nuclear force is larger when the neutron to proton ratio is higher.
- B. The laws of nuclear physics forbid a nucleus from containing more protons than neutrons.
- C. Forces other than the strong nuclear force make the lithium nucleus less stable.
- D. none of these

Answer: c



Watch Video Solution

109. What is the power output of a ${}_{92}\text{U}^{235}$ reactor if it takes 30 days to use up 2kg of fuel, and if each fission gives 185MeV of usable energy ?.

- A. 45 megawatt
- B. 58.46 megawatt
- C. 72 megawatt
- D. 92 megawatt

Answer: b

 [Watch Video Solution](#)

110. Consider the reaction ${}_1^2\text{H} + {}_1^2\text{H} = {}_2^4\text{He} + Q$. Mass of the deuterium atom = $2.0141u$. Mass of helium atom = $4.0024u$. This is a nuclear.....reaction in which the energy Q released is.....MeV.

- A. 12
- B. 6

C. 24

D. 48

Answer: c



Watch Video Solution

111. A radioactive nuclide is produced at the constant rate of n per second (say, by bombarding a target with neutrons). The expected number N of nuclei in existence t s after the number is N_0 is given by

A. $N = N_0 e^{-\lambda t}$

B. $N = N_0 e^{-\lambda t}$

C. $N = \frac{n}{\lambda} + \left(N_0 - \frac{n}{\lambda}\right) e^{-\lambda t}$

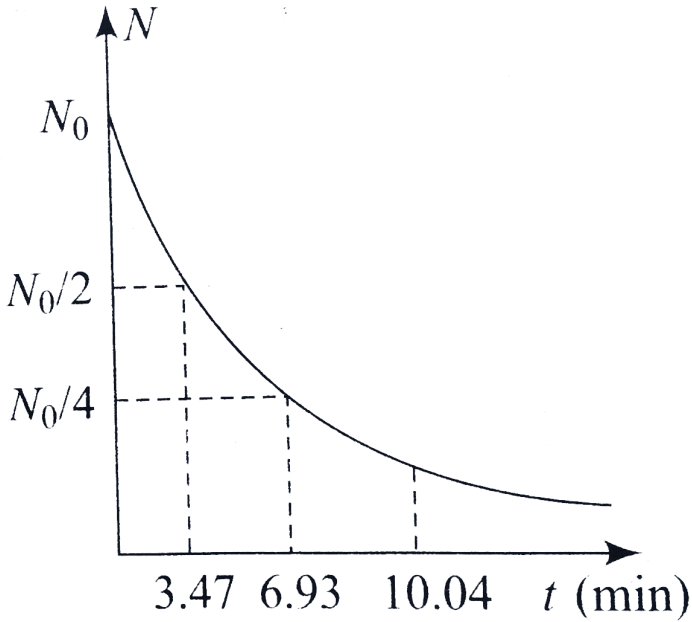
D. $N = \frac{n}{\lambda} + \left(N_0 + \frac{n}{\lambda}\right) e^{-\lambda t}$

Answer: c



Watch Video Solution

112. A radioactive sample undergoes decay as per the following graph. At time $t = 0$, the number of undecayed nuclei is N_0 . Calculate the number of nuclei left after $1h$.



- A. N_0/e^8
- B. N_0/e^{10}
- C. N_0/e^{12}
- D. N_0/e^{14}

Answer: c



[Watch Video Solution](#)

113. The binding energy per nucleon for C^{12} is $7.68MeV$ and that for C^{13} is $7.5MeV$ The energy required to remove a neutron from C^{13} is

- A. $5.49MeV$
- B. $8.46MeV$
- C. $9.45MeV$
- D. $15.49MeV$

Answer: b



[Watch Video Solution](#)

114. A radio nuclide A_1 with decay constant λ_1 transforms into a radio nuclide A_2 with decay constant λ_2 . Assuming that at the initial moment,

the preparation contained only the radio nuclide A_1

(a) Find the equation describing accumulation of radio nuclide A_2 with time. (b) Find the time interval after which the activity of radio nuclide A_2 reaches its maximum value.

A. $\frac{\ln(\lambda_2 / \lambda_1)}{\lambda_2 - \lambda_1}$

B. $\frac{\ln(\lambda_2 / \lambda_1)}{\lambda_2 - \lambda_1}$

C. $\ln(\lambda_2 - \lambda_1)$

D. none of these

Answer: d



Watch Video Solution

115. A radioisotope X has a half-life of $10s$. Find the number of nuclei in the sample (if initially there are 1000 isotopes which are falling from rest from a height of $3000m$) when it is at a height of $1000m$ from reference plane.

A. 50

B. 250

C. 29

D. 100

Answer: b



Watch Video Solution

116. In the nuclear reaction given by ${}_2\text{He}^4 + {}_7\text{N}^{14} \rightarrow {}_1\text{H}^1 + X$ the nucleus X is

A. nitrogen of mass 16

B. nitrogen of mass 17

C. oxygen of mass 16

D. oxygen of mass 17

Answer: d

 [Watch Video Solution](#)

117. A stationary nucleus of mass 24 amu emits a gamma photon. The energy of the emitted photon is $7MeV$. The recoil energy of the nucleus is

- A. 2.2
- B. 1.1
- C. 3.1
- D. 22

Answer: b

 [Watch Video Solution](#)

118. There are n number of radioactive nuclei in a sample that undergoes beta decay. If from the sample, n' number of β -particles are emitted every $2s$, then half-life of nuclei is .

A. $n' / 2$

B. $0.693 \times (2n / n')$

C. $0.6931n(2n / n')$

D. $0.693 \times (n / n')$

Answer: b

 [Watch Video Solution](#)

119. The luminous dials of watches are usually made by mixing a zinc sulphide phosphor with an α -particles emitter. The mass of radium (mass number 226, half-life 1620 years) that is needed to produce an average of 10 α -particles per second for this purpose is

A. 2.77mg

B. 2.77g

C. $2.77 \times 10^{-23}\text{g}$

D. $2.77 \times 10^{-13}\text{kg}$

Answer: d



[Watch Video Solution](#)

120. The following deuterium reactions and corresponding reaction energies are found to occur. S

A. 0.5eV

B. 0.5MeV

C. 0.05MeV

D. 0.05eV

Answer: c



[Watch Video Solution](#)

121. A neutron of energy 1 MeV and mass $1.6 \times 10^{-27}\text{ kg}$ passes a proton at such a distance that the angular momentum of the neutron relative to

the proton approximately equals $10^{-33} Js$. The distance of closest approach neglecting the interaction between particles is

A. $0.44nm$

B. $0.44mm$

C. 0.44\AA

D. $44fm$

Answer: d



Watch Video Solution

122. Rank the following nuclei in order from largest to smallest value of the binding energy per nucleon:

(i) 4_2H , (ii) ${}_{24}^{52}Cr$, (iii) ${}_{62}^{152}Sm$, (iv) ${}_{80}^{100}Hg$, (v) ${}_{92}^{252}Cf$.

A. $E_v > E_{iv} > E(iii) > E_{ii} > E_i$

B. $E_i > E_{ii} > E(iii) > E_{iv} > E_v$

C. $E_{ii} > E_{iii} > E(iv) > E_v > E_i$

$$D. E_i = E_{ii} = E(iii) = E_{iv} = E_v$$

Answer: c



Watch Video Solution

123. A nucleus with atomic number Z and neutron number N undergoes two decay processes. The result is a nucleus with atomic number $Z - 3$ and neutron $N - 1$. Which decay processes took place?

- A. Two β^- decays
- B. Two β^+ decays
- C. An α decay and a β^- decays
- D. *Analphadecay* and *abeta^(+)` decays*

Answer: d



Watch Video Solution

124. Gold ${}_{79}^{198}\text{Au}$ undergoes β^- decay to an excited state of ${}_{80}^{198}\text{Hg}$. If the excited state decays by emission of a γ -photon with energy 0.412MeV , the maximum kinetic energy of the electron emitted in the decay is (This maximum occurs when the antineutrino has negligible energy. The recoil energy of the ${}_{80}^{198}\text{Hg}$ nucleus can be ignored. The masses of the neutral atoms in their ground states are $197.968255u$ for ${}_{79}^{198}\text{Hg}$).

A. 0.412MeV

B. 1.371MeV

C. 0.959MeV

D. 1.473MeV

Answer: c



Watch Video Solution

125. For a certain radioactive substance, it is observed that after $4h$, only 6.25% of the original sample is left undecayed. It follows that.

A. the half-life of the sample is $1h$

B. the mean life of the sample is $\frac{1}{\ln 2}h$

C. the decay constant of the sample is $\ln(2)h^{-1}$

D. after a further $4h$, the amount of the substance left over would be only 0.39% of the original amount

Answer: a,b,c,d



Watch Video Solution

126. Mark out the correct statement(s).

A. Higher binding energy per nucleon means the nucleus is more stable.

B. If the binding energy of nucleus can be negative.

C. Binding energy of a nucleus can be negative.

D. Binding energy of a nucleus is always positive.

Answer: a,b,d



Watch Video Solution

127. Mark out the correct statement (s).

- A. In alpha decay, the energy released is shared between alpha particle and daughter nucleus in the form of kinetic energy and share of alpha particle is more than that of the daughter nucleus.
- B. In beta decay, the energy released is in the form of kinetic energy of beta particles.
- C. In beta minus decay, the energy released is shared between electron and antineutrino.
- D. In gamma decay, the energy released is in the form of energy carried by photons termed as gamma rays.

Answer: a,c,d



Watch Video Solution

128. Mark out the correct statement(s).

- A. For an exothermic reaction, if Q value is $+12.56\text{MeV}$ and the KE of incident particle is 2.44MeV , then the total KE of products of reaction is 15.00MeV .
- B. For an exothermic reaction, if Q value is $+12.56\text{MeV}$ and the KE of incident particle is 2.44MeV , then the total KE of products of reaction is 12.56MeV .
- C. For an endothermic reaction, if we give the energy equal $|Q|$ value of reaction, then the reaction will be carried out.
- D. For an exothermic reaction, the BE per nucleon of products should be greater than the BE per nucleon of reactants.

Answer: a,d



Watch Video Solution

129. Mark out the correct statement (s).

- A. In fission and fusion processes, the mass of reactant nuclide is greater than the mass of product nuclide.
- B. In fission process, BE per nucleon of reactant nuclide is less than the binding energy per nucleon of product nuclide.
- C. In fusion process, BE per nucleon of reactant nuclide is less than the binding energy per nucleon of product nuclide.
- D. In fusion process, BE per nucleon of reactant nuclide is greater than the binding energy per nucleon of product nuclide.

Answer: a,b,c,



Watch Video Solution

130. During β -decay (beta minus), the emission of antineutrino particle is supported by which of the following statement (s)?

- A. Angular momentum conservation holds good in any nuclear reaction
- B. Linear momentum conservation holds good in any nuclear reaction
- C. The KE of emitted β -particle is varying continuously to a maximum value.
- D. none of these

Answer: a,b,c



Watch Video Solution

131. Two samples A and B of same radioactive nuclide are prepared. Sample A has twice the initial activity of sample B. For this situation, mark out the correct statement (s).

- A. The half-lives of both the samples would be same.

B. The half-lives of the samples are different.

C. After each has passed through 5 half-lives, ratio of activity of A to

B is 2: 1.

D. After each has passed through 5 half-lives, ratio of activity of A to B

is 64: 1.

Answer: a,c



Watch Video Solution

132. The decay constant of a radioactive substance is 0.173 year^{-1} .

Therefore,

A. nearly 63 % of the radioactive substance will decay in $(1/0.173)$

year.

B. half-life of the radioactive substance is $(1/0.173)$ year

C. One-fourth of the radioactive substance will be left after 8 years

D. All of the above

Answer: a,c

 [Watch Video Solution](#)

133. A nuclide A undergoes α -decay and another nuclide B undergoes β -decay. Then,

- A. All the α -particles emitted by A will have almost the same speed.
- B. the α -particles emitted by B will have widely different speed.
- C. the β -particles emitted by B will have almost the same speed.
- D. the β -particles emitted by B may have almost the same speed.

Answer: a,d

 [Watch Video Solution](#)

134. If A, Z and N denote the mass number, the atomic number and the neutron number for a given nucleus, then which of the following statement is incorrect?

A. $N = Z + A$

B. isobars have the same A but different Z and N .

C. isotopes have the same Z but different N and A .

D. isotopes have the same N but different A and Z .

Answer: b,c,d



Watch Video Solution

135. It has been found that nuclides with 2, 8, 20, 50, 82, and 126 protons or neutrons are exceptionally stable. These numbers are referred to as the magic numbers and their existence has led to.

- A. the idea of periodicity in nuclear properties similar to the periodicity of chemical elements in periodic table
- B. the so-called "liquid drop model of the nucleus"
- C. the so-called "shell model of the nucleus"
- D. have a convenient explanation of "nuclear fission"

Answer: a,c

 [Watch Video Solution](#)

136. The phenomenon of nuclear fission can be carried out both in a controlled and in an uncontrolled way. Out of the following, the correct statements vis-à-vis these phenomena are:

- A. The fission energy released per reaction is much more than conventional nuclear reactions and one of the products of the reaction is that very particle which initiates the reaction.

- B. It is the "surface to volume" ratio of the sample of nuclear fuel used which determines whether or not the reaction would sustain itself as a 'chain reaction'.
- C. The "control rods" in a nuclear reactor must be made of a material that absorbs neutrons effectively.
- D. The energy released per fission as well as energy released per unit mass of the fuel in nuclear fission are both greater than the corresponding quantities for nuclear fusion.

Answer: a,b,c



Watch Video Solution

137. Choose the correct statements from the following:

- A. Like other light nuclei, the ${}^4_2\text{He}$ nuclei also have a low value of the binding energy per nucleon .

- B. The binding energy per nucleon decreases for nuclei with small as well as large atomic number.
- C. The energy required to remove one neutron from ${}_{3}\text{Li}^7$ to transform it into the isotope ${}_{3}\text{Li}^6$ is 5.6MeV , which is the same as the binding energy per nucleon of ${}_{3}\text{Li}^6$
- D. When two deuterium nuclei fuse together, they give rise to a tritium nucleus accompanied by a release of energy.

Answer: d,c



[Watch Video Solution](#)

138. It is observed that only 0.39% of the original radioactive sample remains undecayed after eight hours. Hence,

- A. the half-life of that substance is $1h$
- B. the mean-life of the substance is $[1 / (\log 2)]h$

C. decay constant of the substance is $(\log 2)h^{-1}$

D. if the number of radioactive nuclei of the this substance at a given

instant is 10, then the number left after 30 min would be 7.5

Answer: a,b,c



Watch Video Solution

139. In a nuclear reactor.

A. the chain reaction is kept under control by rods of cadmium, which

reduces the rate

B. the thick concrete shield is used to slow down the speed of fast

neutrons

C. heavy water (or graphite)moderate the activity of the reactor

D. out of U^{238} and U^{235} natural uranium has less than 1 % of U^{235}

Answer: a,d



Watch Video Solution

140. A radioactive sample has initial concentration N_0 of nuclei. Then,

- A. the number of undecayed nuclei present in the sample decays exponentially with time
- B. the activity (R) of the sample at any instant is directly proportional to the number of undecayed nuclei present in the sample at that time
- C. the number of decayed nuclei grows exponentially with time
- D. the number of decayed nuclei grows linearly with time

Answer: a,b



Watch Video Solution

141. An O^{16} nucleus is spherical and has a radius R and a volume $V = \frac{4}{3}\pi R^3$. According to the empirical observation, the volume of the ${}_{54}X^{128}$ nucleus assumed to be spherical is V' and radius is R' . Then

A. $V' = 8V$

B. $V' = 2V$

C. $R' = 2R$

D. $R' = 8R$

Answer: a,c



Watch Video Solution

142. Statement I: Heavy nuclides tend to have more number of neutrons than protons.

Statements II: In heavy nuclei, as there is coulombic repulsion between protons, so excess of neutrons are preferable:



Watch Video Solution

143. Statements I: ${}_z X^4$ undergoes 2α -decays, 2β -decays (negative β) and 2γ -decays. As a result, the daughter product is ${}_{(z-2)} X^{A-8}$.

Statements II: In β -decay, the mass number decreases by 4 unit and atomic number decreases by 2 unit. In β -decay (negative β), the mass number remains unchanged and atomic number increases by 1 unit. In γ -decay, mass number and atomic number remain unchanged.

 [Watch Video Solution](#)

144. Statements I: The nucleus ${}_Z^A X$ is having atomic mass as well as its mass number as A .

Statements II: Mass number of an element is an integer that specifies an isotopes and has no units, while atomic mass is generally not an integer.

 [Watch Video Solution](#)

145. Statements I: Light nuclei are most stable if $N = Z$, while heavy nuclei are more stable if $N > Z$. ($N \rightarrow$ number of neutrons, $Z \rightarrow$ number of protons)

Statements II: As the number of protons increases in a nucleus, the Coulomb's repulsive force increases, which tends to break the nucleus apart. So, to keep the nucleus stable, more number of neutrons are needed which are neutral in nature.

 [Watch Video Solution](#)

146. Statements I: In alpha decay of different radioactive nuclides, the energy of alpha particles has been compared. It is found that as the energy of alpha particle increases the half-life of the decay goes on decreasing.

Statements II: More is the energy in any decay process, more is the probability of decaying the nuclide which leads to faster rate of decay.

 [Watch Video Solution](#)

147. Staements I: To determine the age of certain very old organic samples, dating of the sample with radioactive isotopes having larger half-life is a better choice than with radioactive isotopes having smaller half-lives.

Staements II: The activity of a radioactive sample having smaller half-life is negligibly small after a very long time and hence makes it next to impossible to get detected.



[Watch Video Solution](#)

148. Staements I: The amount of energy required to remove an average nucleon from different nuclei having different mass numbers is approximately the same, while to remove an average electron from atoms having different mass numbers widely varying amounts of energies are required.

Staements II: Nucleon in a nucleus are bounded by short-range nuclear force while electrons in an atom are bounded by long-range Coulomb force.

 [Watch Video Solution](#)

149. Statements I: The fission of a heavy nucleus is always accompanied with the neutrons along with two product nuclei.

Statements II: For a lighter stable nuclide, the $\frac{N}{Z}$ ratio has to be slightly greater than 1.

 [Watch Video Solution](#)

150. Nuclei of a radioactive element X are being produced at a constant rate K and this element decays to a stable nucleus Y with a decay constant λ and half-life $T_{1/2}$. At the time $t = 0$, there are N_0 nuclei of the element X .

The number N_X of nuclei of X at time $t = T_{1/2}$ is .

A. $\frac{K + \lambda N_0}{2\lambda}$

B. $\frac{(2\lambda N_0 - K)1}{\lambda}$

C. $\left[\lambda N_0 + \frac{K}{2} \right] \frac{1}{\lambda}$

D. Data insufficeint

Answer: a

 Watch Video Solution

151. Nuclei of a radioactive element X are being produced at a constant rate K and this element decays to a stable nucleus Y with a decay constant λ and half-life $T_{1/3}$. At the time $t = 0$, there are N_0 nuclei of the element X .

The number N_Y of nuclei of Y at time t is .

A. $Kt - \frac{K - \lambda N_0}{\lambda} e^{-\lambda t} + \frac{K - \lambda(N_0)}{\lambda}$

B. $Kt + \frac{K - \lambda N_0}{\lambda} e^{-\lambda t} - \frac{K - \lambda(N_0)}{\lambda}$

C. $Kt + \frac{K - \lambda N_0}{\lambda} e^{-\lambda t}$

D. $Kt + \frac{K - \lambda N_0}{\lambda} e^{-\lambda t}$

Answer: b

 Watch Video Solution

152. Nuclei of a radioactive element X are being produced at a constant rate K and this element decays to a stable nucleus Y with a decay constant λ and half-life $T_{1/2}$. At the time $t = 0$, there are N_0 nuclei of the element X .

The number N_X of nuclei of X at time $t = T_{1/2}$ is .

A. $K \frac{\ln 2}{\lambda} + \frac{3}{2} \left(\frac{K - \lambda N_0}{\lambda} \right)$

B. $K \frac{\ln 2}{\lambda} + \frac{1}{2} \left(\frac{K - \lambda N_0}{\lambda} \right)$

C.

D. $K \frac{\ln 2}{\lambda} - 2 \left(\frac{K - \lambda N_0}{\lambda} \right)$

Answer: c



Watch Video Solution

153. A radioactive with decay constant λ is being produced in a nuclear reactor at a rate $q_0 t$ per second, where q_0 is a positive constant and t is

the time. During each decay, E_0 energy is released. The production of radionuclide starts at time $t = 0$.

Which differential equation correctly represents the above process?

A. $\frac{dN}{dt} + \lambda N = q_0 t$

B. $\frac{dN}{dt} - \lambda N = q_0 t$

C. $\frac{dN}{dt} + q_0 t = \lambda N$

D. $\frac{dN}{dt} + q_0 t = -\lambda N$

Answer: a



Watch Video Solution

154. The half-life of the radioactive radon is 3.8 days. The time, at the end of which $1/20$ th of the radon sample will remain undecayed, is (given $\log_{10} e = 0.4343$)

A. 3.8days

B. 16.5days

C. 33days

D. 76days

Answer: b



Watch Video Solution

155. Beta rays emitted by a radioactive material are

A. electromagnetic radiations

B. the electrons orbiting around the nucleus

C. charged particles emitted by the nucleus

D. neutral particles

Answer: c



Watch Video Solution

156. The equation $4\text{}^1_1\text{H} \rightarrow \text{}^4_2\text{He} + 2\text{}^0_{-1}\text{e} + 26\text{MeV}$ represents

A. β -decay

B. γ -decay

C. fusion

D. Fission

Answer: c



Watch Video Solution

157. During a beta decay

A. an atomic electron is ejected

B. an electron which is already present within the nucleus is ejected

C. a neutron in the nucleus decays emitting an electron

D. a part of the binding energy of the nucleus is converted into an electron

Answer: c

 [Watch Video Solution](#)

158. During a nuclear fusion reaction,

A. a heavy nucleus breaks into two fragments by itself

B. a heavy nucleus breaks into two fragments by itself

C. a light nucleus bombarded by thermal neutrons breaks up

D. two light nuclei combine to give a heavier nucleus and possibly other products

Answer: d

 [Watch Video Solution](#)

159. A freshly prepared radioactive source of half-life 2 h emits radiation of intensity which is 64 times the permissible safe level. The minimum time after which it would be possible to work safely with this source is

A. $6h$

B. $12h$

C. $24h$

D. $28h$

Answer: b



Watch Video Solution

160. The decay constant of a radioactive sample is λ . The half-life and mean life of the sample are respectively given by

A. $1/\lambda$ and $(\ln 2)/\lambda$

B. $(\ln 2)\lambda$ and $1/\lambda$

C. $\lambda(\ln 2)$ and $1/\lambda$

D. $\lambda/(\ln 2)$ and $1/\lambda$

Answer: b



Watch Video Solution

161. A star initially has 10^{40} deuterons. It produces energy via the processes ${}_1^2\text{H} + {}_1^2\text{H} \rightarrow {}_1^3\text{H} + p$ and ${}_1^2\text{H} + {}_1^3\text{H} \rightarrow {}_2^4\text{He} + n$.

If the average power radiated by the star is 10^{16} W, the deuteron supply of the star is exhausted in a time of the order of

(a) 10^6 s (b) 10^8 s (c) 10^{12} s

The masses of the nuclei are as follows

$$M({}_1^2\text{H}) = 2.014 \text{ amu}, M(n) = 1.008 \text{ amu},$$

$$M(p) = 1.007 \text{ amu}, M({}_2^4\text{He}) = 4.001 \text{ amu}$$

A. 10^6 s

B. 10^8 s

C. 10^{12} s

D. 10^{16} s

Answer: c



Watch Video Solution

162. Fast neutrons can easily be slowed down by

- A. the use of lead shielding
- B. passing them through water
- C. elastic collision with heavy nuclei
- D. applying a strong electric field

Answer: b



Watch Video Solution

163. Consider alpha particle , β particle and γ - rays , each having an energy of 0.5MeV . In increase order of penetrating power , the radiation are .

A. α, β, γ

B. α, γ, β

C. β, γ, α

D. γ, β, α

Answer: c



Watch Video Solution

164. Atomic masses of two isobars ${}_{29}^{64}\text{Cu}$ and ${}_{34}^{64}\text{Zn}$ are $63.9298u$ and $63.9292u$, respectively. It can be concluded from this data that.

A. both the isobars are stable

B. Zn^{64} is radioactive , decaying to Cu^{64} through β -decay

C. Cu^{64} is radioactive, decaying to Zn^{64} through γ -decay

D. Cu^{64} is radioactive, decaying to Zn^{64} through β -decay

Answer: d



[Watch Video Solution](#)

165. The half-life of ^{131}I is 8 days. Given a sample of ^{131}I at time $t = 0$,

we can assert that

A. no nucleus will decay before $t = 4$ days

B. no nucleus will decay before $t = 8$ days

C. all nucleus will decay before $t = 16$ days

D. a given nucleus may decay at any time after $t = 0$.

Answer: d



[Watch Video Solution](#)

166. In hydrogen spectrum the wavelength of H_α line is $656nm$, where in the spectrum of a distance galaxy H_α line wavelength is $706nm$.
Estimated speed of the galaxy with respect to earth is ,

A. $2 \times 10^8 ms^{-1}$

B. $2 \times 10^7 ms^{-1}$

C. $2 \times 10^6 ms^{-1}$

D. $2 \times 10^5 ms^{-1}$

Answer: b



Watch Video Solution

167. Order of magnitude of density of uranium nucleus is (

$m_p = 1.67 \times 10^{-27} kg$)

A. $10^{20} kgm^{-3}$

B. $10^{17} kgm^{-3}$

C. 10^{14}kgm^{-3}

D. 10^{11}kgm^{-3}

Answer: b



Watch Video Solution

168. Ne nucleus , the after absorbing energy , decays into two α particle and an unknown nucleus . The unknown nucleus is

A. nitrogen

B. carbon

C. boron

D. oxygen

Answer: b



Watch Video Solution

169. The half-life period of a radioactive element x is same as the mean life time of another radioactive element y . Initially, both of them have the same number of atoms. Then,

- (a) x and y have the same decay rate initially
- (b) x and y decay at the same rate always
- (c) y will decay at a faster rate than x
- (d) x will decay at a faster rate than y

A. X and Y have the same decay rate initially

B. X and Y decay at the same rate always

C. Y will decay at a faster rate than X

D. X will decay at a faster rate than Y

Answer: c



Watch Video Solution

170. Which of the following is a correct statement?

- A. Beta rays are same as cathode rays.
- B. Gamma rays are high-energy neutrons.
- C. Alpha particles are singly ionized helium atoms.
- D. Protons and neutrons have exactly the same mass

Answer: a

 [Watch Video Solution](#)

171. Two radioactive materials X_1 and X_2 have decay constants 10λ and λ , respectively. If initially they have the same number of nuclei, then the ratio of the number of nuclei of X_1 to that of X_2 will be $1/e$ after a time
- (a) $1/10\lambda$ (b) $1/11\lambda$ (c) $11/10\lambda$ (d) $1/9\lambda$

A. $\frac{1}{10\lambda} s$

B. $\frac{1}{11\lambda}$

C. $\frac{11}{10\lambda}$

D. $\frac{1}{9\lambda}$

Answer: d



[Watch Video Solution](#)

172. The electron emitted in beta radiation originates from

- A. inner orbits of atoms
- B. free electrons existing in nuclei
- C. decay of a neutron in a nucleus
- D. photon escaping from the nucleus

Answer: c



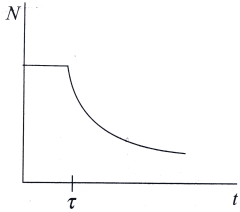
[Watch Video Solution](#)

173. A radioactive sample consists of two distinct species having equal number of atoms initially. The mean life of one species is τ and that of the other is 5τ . The decay products in both cases are stable. A plot is

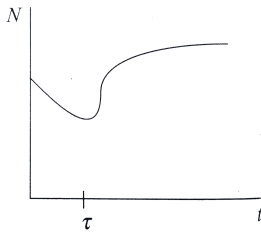
made of the total number of radioactive nuclei as a function of time.

Which of the following figure best represents the form of this plot?

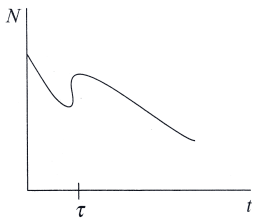
(a), (b), (c), (d)



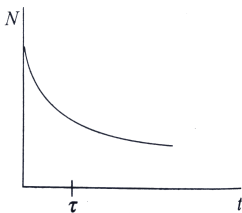
A. a.



B. b.



C. c.



D. d.

Answer: d



Watch Video Solution

174. The half-life of ^{215}At is $100\mu\text{s}$. The time taken for the activity of a sample of ^{215}At to decay to $\frac{1}{16}$ th of its initial value is

A. $400\mu\text{s}$

B. $6.3\mu\text{s}$

C. $40\mu\text{s}$

D. $300\mu\text{s}$

Answer: a



Watch Video Solution

175. Which of the following process represents a γ - decay?

A. $\hat{\ }^A X_Z + \gamma \rightarrow \hat{\ }^A X_{Z-1} + a + b$

B. $\hat{\ }^A X_Z + {}^1_0 n_0 \rightarrow \hat{\ }^{A-3} X_{Z-2} + ac$

C. $\hat{\ }^A X_Z \rightarrow \hat{\ }^A X_Z + f$

D. $\hat{\ }^A X_Z + e_{-1} \rightarrow \hat{\ }^A X_{Z-1} + g$

Answer: c

 [Watch Video Solution](#)

176. For uranium nucleus how does its mass vary with volume?

A. $m \propto V$

B. $m \propto 1/V$

C. $m \propto (\sqrt{V})$

D. $m \propto V^2$

Answer: a

 [Watch Video Solution](#)

177. A nucleus with mass number 220 initially at rest emits an α particle. If the Q value of the reaction is 5.5 MeV, the kinetic energy of the α particle is

A. 4.4MeV

B. 5.4MeV

C. 5.6MeV

D. 6.5MeV

Answer: b



[Watch Video Solution](#)

178. A 280 day old radioactive substances shows an activity of 6000 dps, 140 days later its activity becomes 3000 dps. What was its initial activity ?

A. 20000dps

B. $24000dps$

C. $120000dps$

D. $6000dps$

Answer: b



Watch Video Solution

179. If a star converts all helium in its core to oxygen then energy released per oxygen nuclei is

[Mass of He = 4.0026 amu, Mass of O = 15.9994 amu]

A. $7.6MeV$

B. $56.12MeV$

C. $10.24MeV$

D. $23.9MeV$

Answer: c

[Watch Video Solution](#)

180. ${}_{87}^{221}\text{Ra}$ is a radioactive substance having half life of 4 days .Find the probability that a nucleus undergoes decay after two half lives

A. 1

B. $\frac{1}{2}$

C. $\frac{3}{4}$

D. $\frac{1}{4}$

Answer: b

[Watch Video Solution](#)

181. In the option given below , let E denote the rest mass energy of a nucleus and n a neutron .The correct option is

A. $E({}_{92}^{236}\text{U}) > E({}_{53}^{137}\text{I}) + E({}_{39}^{97}\text{Y}) + 2E(n)$

$$B. E({}_{92}^{236}\text{U}) < E({}_{53}^{137}\text{I}) + E({}_{39}^{97}\text{Y}) + 2E(n)$$

$$C. E({}_{92}^{236}\text{U}) < E({}_{56}^{140}\text{Ba}) + E({}_{36}^{94}\text{Kr}) + 2E(n)$$

$$D. E({}_{92}^{236}\text{U}) = E({}_{56}^{140}\text{Ba}) + E({}_{36}^{94}\text{Kr}) + 2E(n)$$

Answer: a



Watch Video Solution

182. At some instant, a radioactive sample S_1 having an activity $5 \mu\text{Ci}$ has twice the number of nuclei as another sample S_2 which has an activity of $10 \mu\text{Ci}$. The half lives of S_1 and S_2 are :

- A. 20years and 5years, respectively.
- B. 20years and 10years, respectively.
- C. 10yearseach
- D. 5yearseach

Answer: a

[Watch Video Solution](#)

Linked Comprehension

1. A radioactive with decay constant λ is being produced in a nuclear reactor at a rate q_0 per second, where q_0 is a positive constant and t is the time. During each decay, E_0 energy is released. The production of radionuclide starts at time $t = 0$.

Instantaneous power developed at time t due to the decay of the radionuclide is .

A. $(q_0 t - q_0 / \lambda) + q_0 / \lambda e^{-\lambda t} E_0$

B. $(q_0 t + q_0 / \lambda) - q_0 / \lambda e^{-\lambda t} E_0$

C. $(q_0 t + q_0 / \lambda) + q_0 / \lambda e^{-\lambda t} E_0$

D. $(q_0 t + q_0 / \lambda) - q_0 / \lambda e^{-\lambda t} E_0$

Answer: a

[Watch Video Solution](#)

2. A radioactive with decay constant λ is being produced in a nuclear reactor at a rate q_0 per second, where q_0 is a positive constant and t is the time. During each decay, E_0 energy is released. The production of radionuclide starts at time $t = 0$.

Average power developed in time t due to the decay of the radionuclide is

A. $\left(\frac{q_0 t}{2} - \frac{q_0}{\lambda} + \frac{q_0}{\lambda^2 t} - \frac{q_0}{\lambda^2 t} e^{-\lambda t} E_0 \right)$

B. $\left(\frac{q_0 t}{2} + \frac{q_0}{\lambda} + \frac{q_0}{\lambda^2 t} - \frac{q_0}{\lambda^2 t} e^{-\lambda t} E_0 \right)$

C. $\left(\frac{q_0 t}{2} - \frac{q_0}{\lambda} + \frac{q_0}{\lambda^2 t} + \frac{q_0}{\lambda^2 t} e^{-\lambda t} E_0 \right)$

D. $\left(\frac{q_0 t}{2} + \frac{q_0}{\lambda} + \frac{q_0}{\lambda^2 t} + \frac{q_0}{\lambda^2 t} e^{-\lambda t} E_0 \right)$

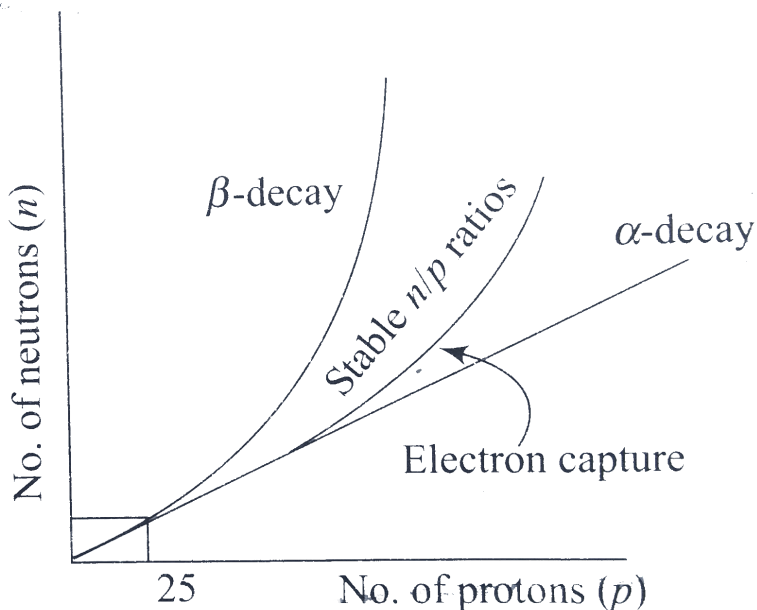
Answer: a



Watch Video Solution

3. Various rules of thumb have been proposed by the scientific community to explain the mode of radioactive decay by various radioisotopes. One of

the major rules is called the n/p ratio. If all the known isotopes of the elements are plotted on a graph of number of neutrons (n) versus number of protons (p), it is observed that all isotopes lying outside of a "stable" n/p ratio region are radioactive as shown in fig. The graph exhibits straight line behaviour with unit slope up to $p = 25$. Above $p = 25$, those isotopes with n/p ratios lying above the stable region usually undergo beta decay. Very heavy isotopes ($p > 83$) are unstable because of their relatively large nuclei and they undergo alpha decay. Gamma ray emission does not involve the release of a particle. It represents a change in an atom from a higher energy level to a lower energy level.



How would the radioisotope of magnesium with atomic mass 27 undergo radioactive decay?.

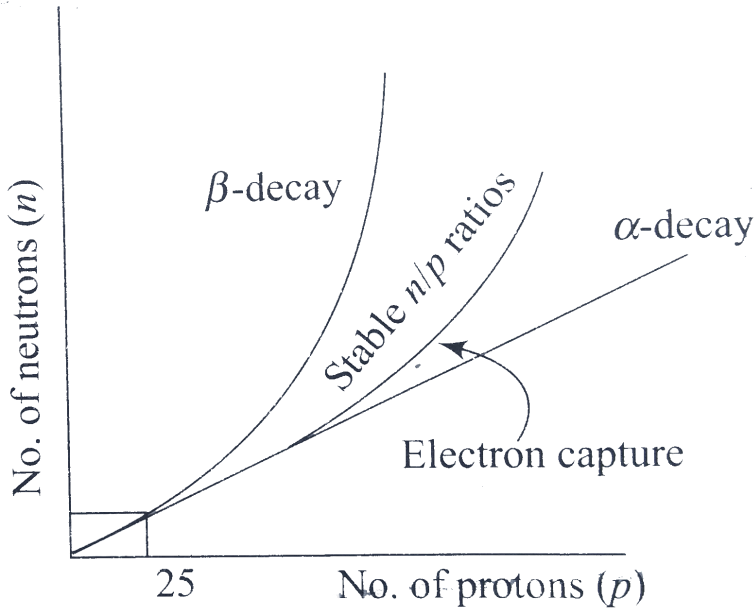
- A. electron capture
- B. alpha decay
- C. beta decay
- D. gamma ray emission

Answer: c

 [Watch Video Solution](#)

4. Various rules of thumb have been proposed by the scientific community to explain the mode of radioactive decay by various radioisotopes. One of the major rules is called the n/p ratio. If all the known isotopes of the elements are plotted on a graph of number of neutrons (n) versus number of protons (p), it is observed that all isotopes lying outside of a "stable" n/p ratio region are radioactive as shown in the graph. The graph exhibits straight line behaviour with unit slope up to $p = 25$. Above $p = 25$, the slope

isotopes with n/p ratios lying above the stable region usually undergo beta decay. Very heavy isotopes ($p > 83$) are unstable because of their relatively large nuclei and they undergo alpha decay. Gamma ray emission does not involve the release of a particle. It represents a change in an atom from a higher energy level to a lower energy level.



Th – 230 undergoes a series of radioactive decay processes resulting in *Bi* – 214 being the final product. What was the sequence of the processes that occurred?

A. $\alpha, \alpha, \alpha, \gamma, \beta$

B. $\alpha, \alpha, \alpha, \alpha, \beta$

C. $\alpha, \alpha, \beta, \beta$

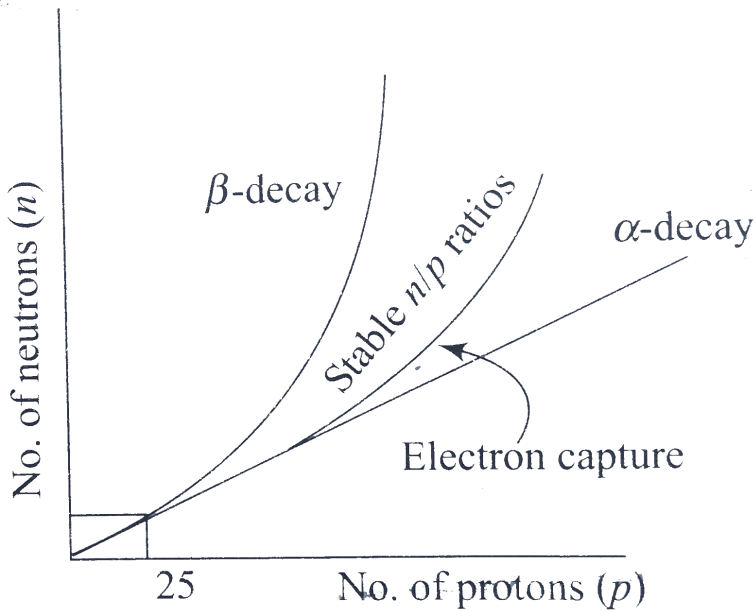
D. $\alpha, \beta, \beta, \beta, \gamma$

Answer: b



Watch Video Solution

5. Various rules of thumb have been proposed by the scientific community to explain the mode of radioactive decay by various radioisotopes. One of the major rules is called the n/p ratio. If all the known isotopes of the elements are plotted on a graph of number of neutrons (n) versus number of protons (p), it is observed that all isotopes lying outside of a "stable" n/p ratio region are radioactive as shown in fig.5.28. The graph exhibits straight line behaviour with unit slope up to $p = 25$. Above $p = 25$, those isotopes with n/p ratios lying above the stable region usually undergo beta decay. Very heavy isotopes ($p > 83$) are unstable because of their relatively large nuclei and they undergo alpha decay. Gamma ray emission does not involve the release of a particle. It represents a change in an atom from a higher energy level to a lower energy level.



Which of the following represents the relative penetrating power of the three types of radioactive emission in decreasing order?

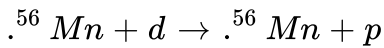
- A. $\beta > \alpha > \gamma$
- B. $\beta > \gamma > \alpha$
- C. $\gamma > \alpha > \beta$
- D. $\gamma > \beta > \alpha$

Answer: d

[Watch Video Solution](#)

6. The radionuclide ^{56}Mn is being produced in a cyclotron at a constant rate P by bombarding a manganese target with deuterons.

^{56}Mn has a half-life of $2.5h$ and the target contains large numbers of only the stable manganese isotopes ^{56}Mn . The reaction that produces ^{56}Mn is



After being bombarded for a long time, the activity of ^{56}Mn becomes constant, equal to $13.86 \times 10^{10} \text{ s}^{-1}$. (Use $1n2 = 0.693$, Avagardo number $= 6 \times 10^{23}$, atomic weight of $^{56}\text{Mn} = 56 \text{ gmol}^{-1}$).

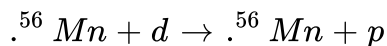
At what constant rate P , ^{56}Mn nuclei are being produced in the cyclotron during the bombardment?

- A. $2 \times 10^{11} \text{ nuclei s}^{-1}$
- B. $13.86 \times 10^{10} \text{ nuclei s}^{-1}$
- C. $9.6 \times 10^{10} \text{ nuclei s}^{-1}$
- D. $6.93 \times 10^{10} \text{ nuclei s}^{-1}$

Answer: b

7. The radionuclide ${}^{56}\text{Mn}$ is being produced in a cyclotron at a constant rate P by bombarding a manganese target with deuterons.

${}^{56}\text{Mn}$ has a half-life of $2.5h$ and the target contains large numbers of only the stable manganese isotopes ${}^{56}\text{Mn}$. The reaction that produces ${}^{56}\text{Mn}$ is



After being bombarded for a long time, the activity of ${}^{56}\text{Mn}$ becomes constant, equal to $13.86 \times 10^{10} \text{ s}^{-1}$. (Use $\ln 2 = 0.693$, Avagardo number $= 6 \times 10^{23}$, atomic weight of ${}^{56}\text{Mn} = 56 \text{ gmol}^{-1}$).

At what constant rate P , ${}^{56}\text{Mn}$ nuclei are being produced in the cyclotron during the bombardment?

A. 5×10^{11}

B. 20×10^{11}

C. 1.2×10^{14}

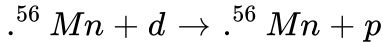
D. 1.8×10^{15}

Answer: d



Watch Video Solution

8. The radionuclide ${}^{56}\text{Mn}$ is being produced in a cyclotron at a constant rate P by bombarding a manganese target with deuterons. ${}^{56}\text{Mn}$ has a half-life of $2.5h$ and the target contains large numbers of only the stable manganese isotopes ${}^{56}\text{Mn}$. The reaction that produces ${}^{56}\text{Mn}$ is



After being bombarded for a long time, the activity of ${}^{56}\text{Mn}$ becomes constant, equal to $13.86 \times 10^{10} s^{-1}$. (Use $\ln 2 = 0.693$, Avagardo number $= 6 \times 10^2$, atomic weight of ${}^{56}\text{Mn} = 56 g mol^{-1}$).

After a long time bombardment, number ${}^{56}\text{Mn}$ nuclei present in the target depends upon.

- (i) number of Mn nuclei present at the start of the process.
- (ii) half life of Mn.
- (iii) constant rate of production P

A. All (i), (ii), and (iii) are correct.

B. Only (i) and (ii) are correct.

C. Only (ii) and (iii) are correct.

D. Only (i) and (iii) are correct.

Answer: c



Watch Video Solution

9. Many unstable nuclei can decay spontaneously to a nucleus of lower mass but different combination of nucleons. The process of spontaneous emission of radiation is called radioactivity substance.

Radioactive decay is a statistical process. Radioactivity is independent of all external conditions. The number of decays per unit time or decay rate is called activity. Activity exponentially decrease with time. Mean lifetime is always greater than half-life time.

Choose the correct statement about radioactivity:

A. Radioactivity is a statistical process.

- B. Radioactivity is independent of high temperature and high pressure
- C. When a nucleus undergoes α - or β -decay, its atomic number changes.
- D. All of the these

Answer: d

 [Watch Video Solution](#)

10. Many unstable nuclei can decay spontaneously to a nucleus of lower mass but different combination of nucleons. The process of spontaneous emission of radiation is called radioactivity substance.

Radioactive decay is a statistical process. Radioactivity is independent of all external conditions. The number of decays per unit time or decay rate is called activity. Activity exponentially decrease with time. Mean lifetime is always greater than half-life time.

If T_H is the half-life and T_M is the mean life. Which of the following statement is correct.

A. $T_M > T_H$

B. $T_M < T_H$

C. Both are directly proportional to square of the decay constant.

D. $T_M \propto \lambda_0$

Answer: a

 [Watch Video Solution](#)

11. Many unstable nuclei can decay spontaneously to a nucleus of lower mass but different combination of nucleons. The process of spontaneous emission of radiation is called radioactivity substance.

Radioactive decay is a statistical process. Radioactivity is independent of all external conditions. The number of decays per unit time or decay rate is called activity. Activity exponentially decreases with time. Mean lifetime is always greater than half-life time.

n number of α -particles per second are being emitted by B atoms of a radioactive element. The half-life of element will be

A. $\frac{n}{N} s$

B. $\frac{N}{n} s$

C. $0.693 \frac{N}{n} s$

D. $0.693 \frac{n}{N} s$

Answer: c

 [Watch Video Solution](#)

12. All nuclei consist of two types of particles- proton and neutrons. Nuclear force is the strongest force. Stability of nucleus is determined by the neutron - proton ratio or mass defect or binding energy per nucleus or packing fraction. Shape of nucleus is calculated by quadrupole moment. Spin of nucleus depends on even or odd mass number. Volume of nucleus depends on the mass number. Whole mass of the atom (nearly 99 %) is centered at the nucleus. Magnetic moment of the nucleus is measured in terms of the nuclear magnetons.

The correct statements about nuclear force is/are

- A. Charge independent
- B. short-range force
- C. non-conservation force
- D. spin-dependent force

Answer: a,b,c,d

 [Watch Video Solution](#)

13. All nuclei consist of two types of particles- proton and neutrons. Nuclear force is the strongest force. Stability of nucleus is determined by the neutron - proton ratio or mass defect or binding energy per nucleus or packing fraction. Shape of nucleus is calculated by quadrupole moment. Spin of nucleus depends on even or odd mass number. Volume of nucleus depends on the mass number. Whole mass of the atom (nearly 99 %) is centered at the nucleus. Magnetic moment of the nucleus is measured in terms of the nuclear magnetons.

Binding energy per nucleon is maximum.

- A. for lighter order element (lows mass number)
- B. for heavier oreder elements (high mass number)
- C. for middle order elements
- D. equal for all order elements

Answer: c

 [Watch Video Solution](#)

14. All nuclei consist of two types of particles- protaon and neutrons. Nuclear force is the strongest froce. Stability of nucleus is determined by the neutron - proton ratio or mass defect or binding energy per nucleus or packing fraction. Shape of nucleus is calculated by quadrupole moment. Spin of nucleus depends on even or odd mass number. Volume of nucleus depends on the mass number. Whole mass of the atom (nearly 99 %) is centered at the nucleus. Magnetic moment of the nucleus is measured in terms of the nuclear magnetons.

Volume (V) of the nucleus is related to mass number (A) as

A. $V \propto A^2$

B. $V \propto A^{1/3}$

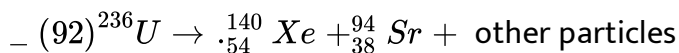
C. $V \propto A^{2/3}$

D. $V \propto A$

Answer: d

 [Watch Video Solution](#)

15. The compound unstable nucleus ${}_{92}^{236}\text{U}$ often decays in accordance with the following reaction



During the reaction, the uranium nucleus "fissions" (splits) into the two smaller nuclei which have higher nuclear binding energy per nucleon (although the lighter nuclei have lower total nuclear binding energies, because they contain fewer nucleons).

Inside a nucleus, the nucleons (protons and neutrons) attract each other with a "strong nuclear" force. All nucleons exert approximately the same

strong nuclear force on each other. This force holds the nuclear are very close together at intranuclear distances.

In the nuclear reaction presented above, the "other particles" might be .

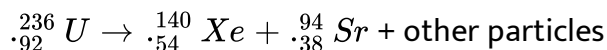
- A. An alpha particle, which consists of two protons and two neutrons
- B. two protons
- C. one proton and one neutron
- D. two neutrons

Answer: d



[Watch Video Solution](#)

16. The compound unlabel nucleus ${}_{92}^{236}\text{U}$ often decays in accordance with the following reaction



During the reaction, the uranium nucleus "fissions" (splits) into the two smaller nuclei have higher nuclear binding energy per nucleon (although the lighter nuclei have lower total nuclear binding energies, because they

contain fewer nucleons).

Inside a nucleus, the nucleons (protons and neutrons) attract each other with a "strong nuclear" force. All neutrons exert approximately the same strong nuclear force on each other. This force holds the nucleons very close together at intranuclear distances.

Why is a ${}^4_2\text{He}$ nucleus more stable than a ${}^4_3\text{Li}$ nucleus?

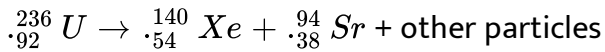
- A. The strong nuclear force is larger when the neutron to proton ratio is higher.
- B. The laws of nuclear physics forbid a nucleus from containing more protons than neutrons.
- C. Forces other than the strong nuclear force make the lithium nucleus less stable.
- D. None of the above.

Answer: a



[Watch Video Solution](#)

17. The compound unstable nucleus ${}_{92}^{236}\text{U}$ often decays in accordance with the following reaction



During the reaction, the uranium nucleus "fissions" (splits) into the two smaller nuclei have higher nuclear binding energy per nucleon (although the lighter nuclei have lower total nuclear binding energies, because they contain fewer nucleons).

Inside a nucleus, the nucleons (protons and neutrons) attract each other with a "strong nuclear" force. All nucleons exert approximately the same strong nuclear force on each other. This force holds the nucleons very close together at intranuclear distances.

A proton and a neutron are both shot at 100m/s^{-1} toward a ${}_{6}^{12}\text{C}$ nucleus. Which particle, if either, is more likely to be absorbed by the nucleus?

A. The proton

B. The neutron

C. Both particles are about equally likely to be absorbed.

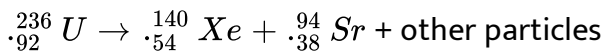
D. Neither particle will be absorbed.

Answer: b



Watch Video Solution

18. The compound unstable nucleus ${}_{92}^{236}\text{U}$ often decays in accordance with the following reaction

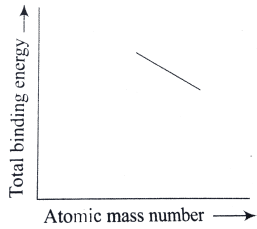


During the reaction, the uranium nucleus "fissions" (splits) into the two smaller nuclei have higher nuclear binding energy per nucleon (although the lighter nuclei have lower total nuclear binding energies, because they contain fewer nucleons).

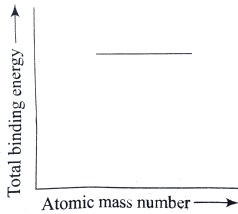
Inside a nucleus, the nucleons (protons and neutrons) attract each other with a "strong nuclear" force. All nucleons exert approximately the same strong nuclear force on each other. This force holds the nucleons very close together at intranuclear distances.

Which of the following graphs might represent the relationship between

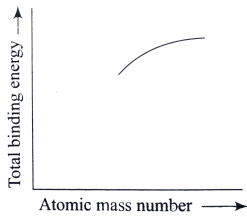
atomic number (i.e., "atomic weight") and the total binding energy of the nucleus, for nuclei heavier than ${}_{38}^{94}\text{Sr}$?



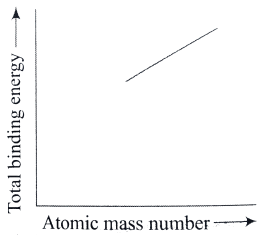
A. a.



B. b.



C. c.



D. d.

Answer: c



Watch Video Solution

19. A beam of alpha particles is incident on a target of lead. A particular alpha particle comes in 'head-on' to a particular lead nucleus and stops 6.50×10^{-14} m away from the center of the nucleus. (This point is well outside the nucleus.) Assume that the lead nucleus, which has 82 protons, remains at rest. The mass of alpha particle is 6.64×10^{-27} kg

Calculate the electrostatic potential energy at the instant when the alpha particle stops?

A. 36.3 MeV

B. 45.0 MeV

C. 3.63 MeV

D. 40.0 MeV

Answer: c



Watch Video Solution

20. A beam of alpha particles is incident on a target of lead. A particular alpha particle comes in 'head-on' to a particular lead nucleus and stops $6.50 \times 10^{-14} \text{ m}$ away from the center of the nucleus. (This point is well outside the nucleus.) Assume that the lead nucleus, which has 82 protons, remains at rest. The mass of alpha particle is $6.64 \times 10^{-27} \text{ kg}$

What initial kinetic energy (in joule and in MeV) did the alpha particle have?

A. 36.3

B. 0.36

C. 3.63

D. 2.63

Answer: c



Watch Video Solution

21. A beam of alpha particles is incident on a target of lead. A particular alpha particle comes in 'head-on' to a particular lead nucleus and stops 6.50×10^{-14} m away from the center of the nucleus. (This point is well outside the nucleus.) Assume that the lead nucleus, which has 82 protons, remains at rest. The mass of alpha particle is 6.64×10^{-27} kg

What was the initial speed of the alpha particle?

A. $132. \times 10^2 \text{ms}^{-1}$

B. $1.32. \times 10^7 \text{ms}^{-1}$

C. $13.2. \times 10^2 \text{ms}^{-1}$

D. $0.13. \times 10^7 \text{ms}^{-1}$

Answer: b



Watch Video Solution

22. A nucleus kept at rest in free space, breaks up into smaller nuclei of masses ' m ' and ' $2m$ '. Total energy generated in this fission is E . The

bigger part is radioactive, emits five gamma ray photons in the direction opposite to its velocity and finally comes to rest.

[Given $h = 6.6 \times 10^{-34} \text{ Js}$, $m = 1 \times 10^{-26} \text{ Kg}$, $E = 3.63 \times 10^{-8} \text{ mc}^2$, $C =$

Fractional loss of mass in the fission is

A. 1.21×10^{-8}

B. 2.56×10^{-8}

C. 1.73×10^{-8}

D. 3.52×10^{-8}

Answer: a

 [Watch Video Solution](#)

23. A nucleus kept at rest in free space, breaks up into smaller nuclei of masses ' m ' and ' $2m$ '. Total energy generated in this fission is E . The bigger part is radioactive, emits five gamma ray photons in the direction opposite to its velocity and finally comes to rest.

[Given $h = 6.6 \times 10^{-34} \text{ Js}$, $m = 1 \times 10^{-26} \text{ Kg}$, $E = 3.63 \times 10^{-8} \text{ mc}^2$, $C =$

Velocity of small daughter nucleus is

A. $5.6 \times 10^4 \text{ ms}^{-1}$

B. $6.6 \times 10^4 \text{ ms}^{-1}$

C. $7.6 \times 10^4 \text{ ms}^{-1}$

D. $8.6 \times 10^4 \text{ ms}^{-1}$

Answer: b



Watch Video Solution

24. A nucleus kept at rest in free space, breaks up into smaller nuclei of masses ' m ' and ' $2m$ '. Total energy generated in this fission is E . The bigger part is radioactive, emits five gamma ray photons in the direction opposite to its velocity and finally comes to rest.

[Given $h = 6.6 \times 10^{-34} \text{ Js}$, $m = 1 \times 10^{-26} \text{ Kg}$, $E = 3.63 \times 10^{-8} \text{ mc}^2$, $C =$

The wavelength of the gamma ray is

A. 0.02\AA

B. 0.03\AA

C. 0.04\AA

D. 0.05\AA

Answer: b

 [Watch Video Solution](#)

25. Nuclei A and B convert into a stable nucleus C . Nucleus A is converted into C by emitting 2α particles and 3β -particles. Nucleus B is converted into C by emitting one α -particle and 5β -particles. At time $t = 0$, nuclei of A are $4N_0$ and nuclei of B are N_0 . Initially, number of nuclei of C are zero. Half-life of A (into conversion of C) is 1 min and that of B is 2 min. Find the time (in minutes) at which rate of disintegration of A and B are equal.

 [Watch Video Solution](#)

26. The half-life of a radioactive nucleus is 20 hours. What fraction of original activity will remain after 40 hours?

 [Watch Video Solution](#)

27. A radioactive sample has 8.0×10^{18} active nuclei at a certain instant. How many of these nuclei will still be in the active state after two half-life (in $\times 10^{18}$)?

 [Watch Video Solution](#)

28. A radioactive sample decays with an average life of $20ms$. A capacitor of capacitance $100\mu F$ is charged to some potential and then the plates are connected through a resistance R . What should be the value of R so that the ratio of the charge on the capacitor to the activity of the radioactive sample remains constant in time?

 [Watch Video Solution](#)

29. A radioactive sample decays through two different decay processes α -decay and β -decay. Half-life time for α -decay is 3h and half-life time for β -decay is 6h. What will be the ratio of number of initial radioactive to the number of nuclei present after 6h?

 [Watch Video Solution](#)

Integer

1. If ${}_{92}U^{238}$ changes to ${}_{85}At^{210}$ by a series of α and β decays, the number of α and β decays undergone is

 [Watch Video Solution](#)

2. A certain radioactive material can undergo three different types of decay, each with a different decay constant λ , 2λ , and 3λ . Then, the effective decay constant λ_{eff} is

 [Watch Video Solution](#)

 Watch Video Solution

3. The radioactive of a sample is R_1 at a time T_1 and R_2 at a time T_2 . If the half-life of the specimen is T , the number of atoms that have disintegrated in the time $(T_2 - T_1)$ is equal to $\frac{n(R_1 - R_2)T}{\ln 4}$. Here n is some integral number. What is the value of n ?

 Watch Video Solution

4. The radioactive decay rate of a radioactive element is found to be 10^3 disintegration per second at a certain time . If the half life of the element is one second , the decay rate after one second And after three second is

 Watch Video Solution

5. How many alpha and beta particles are emitted when uranium (${}_{92}\text{U}^{238}$) decays to lead (${}_{82}\text{Pb}^{206}$)?

 [Watch Video Solution](#)

6. When Boron nucleus B_5^{10} is bombarded by neutrons , alpha- particle are emitted . The resulting nucleus is of the element and has the mass number....

 [Watch Video Solution](#)

Fill In The Blanks

1. Atoms having the same but different are called isotopes .

 [Watch Video Solution](#)

2. Binding energy per nucleon of $1H^2$ and $2He^4$ are 1.1 MeV and 7.0 respectively Energy realised in the process $1H^2 + 1He^4$ is

 [Watch Video Solution](#)

3. In the nuclear process , $C_6^{11} \rightarrow {}_2B^{11} + \beta^+ + X$, X stands for.....

 [Watch Video Solution](#)

4. Consider the reaction ${}_1^2H + {}_1^2H = {}_2^4He + Q$. Mass of the deuterium atom = $2.0141u$. Mass of helium atom = $4.0024u$. This is a nuclear.....reaction in which the energy Q released is.....MeV.


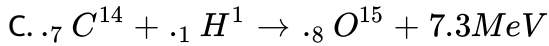
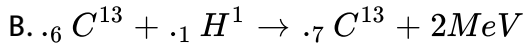
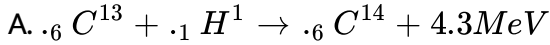
 [Watch Video Solution](#)

5. The order of magnitude of the density of nuclear matter is $10^4 kgm^{-3}$

 [Watch Video Solution](#)

Multiple correct option

1. From the following equations pick out the possible nuclear fusion reactions



Answer: a,b,c



Watch Video Solution

2. Which of the following statement (s) is (are) correct ?

A. The rest mass of a stable nucleus is less than the sum of the rest masses of its separated nucleons.

B. The rest mass of a stable nucleus is greater than the sum of the rest masses of its separated nucleons.

C. In nuclear fission, energy is released by fusing two nuclei of medium mass (approximately 100 a.m.u.)

D. In nuclear fission, energy is released by fragmentation of a very heavy nucleus.

Answer: a,d

 [Watch Video Solution](#)

3. Let m_p be the mass of a proton, m_n the mass of a neutron, M_1 the mass of a ${}^{20}_{10}\text{Ne}$ nucleus and M_2 the mass of a ${}^{40}_{20}\text{Ca}$ nucleus. Then

A. $M_2 = 2M_1$

B. $M_2 > 2M_1$

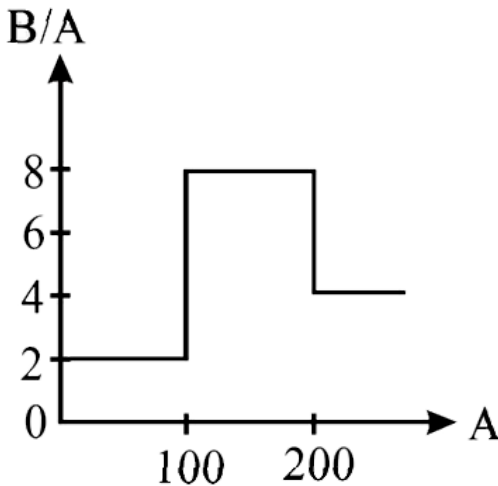
C. $M_2 < 2M_1$

D. $M_1 < 10(m_p + m_n)$

Answer: c,d



4. Assume that the nuclear binding energy per nucleus (B/A) versus mass number (A) is as shown in the figure Use this plot to choose the correct (s) choice given below



- A. Fusion of nuclei with mass numbers lying in the range of $1 < A < 50$ will release energy.
- B. Fusion of nuclei with mass numbers lying in the range of $51 < A < 100$ will release energy.

C. Fission of a nucleus lying in the mass range of $100 < A < 260$ will release energy when broken into equal fragments.

D. Fission of a nucleus lying in the mass range of $200 < A < 260$ will release energy when broken into equal fragments.

Answer: b,d

 [Watch Video Solution](#)

Linked comprehension type

1. Scientists are working hard to develop nuclear fusion reactor. Nuclei of heavy hydrogen, ${}_1^2\text{H}$, known as deuteron and denoted by D , can be thought of as a candidate for fusion reactor. The $D - D$ reaction is ${}_1^2\text{H} + {}_1^2\text{H} \rightarrow {}_2^4\text{He} + n + \text{energy}$. In the core of fusion reactor, a gas of heavy hydrogen of ${}_1^2\text{H}$ is fully ionized into deuteron nuclei and electrons. This collection of ${}_1^2\text{H}$ nuclei and electrons is known as plasma. The nuclei move randomly in the reactor core and occasionally

come close enough for nuclear fusion to take place. Usually, the temperature in the reactor core are too high and no material will can be used to confine the to plasma for a time t_0 before the particles fly away from the core. If n is the density (number volume) of deuterons, the product nt_0 is called Lawson number. In one of the criteria, a reactor is termed successful if Lawson number is greater than $5 \times 10^{14} \text{ s/cm}^2$

it may be helpful to use the following boltzmann constant

$$\lambda = 8.6 \times 10^{-5} \text{ eV/k}, \frac{e^2}{4\pi s_0} = 1.44 \times 10^{-9} \text{ eVm}$$

In the core of nucleus fusion reactor, the gas become plasma because of

- A. strong nuclear force acting between the deuterons
- B. Coulomb force acting between the deuterons
- C. Coulomb force acting between deuteron-electron pairs
- D. the high pairs temperature maintained inside the reactor core

Answer: D



Watch Video Solution

2. Scientists are working hard to develop nuclear fusion reactor. Nuclei of heavy hydrogen, ${}^2_1\text{H}$, known as deuteron and denoted by D , can be thought of as a candidate for fusion reactor. The $D - D$ reaction is ${}^2_1\text{H} + {}^2_1\text{H} \rightarrow {}^3_2\text{He} + n + \text{energy}$. In the core of fusion reactor, a gas of heavy hydrogen of ${}^2_1\text{H}$ is fully ionized into deuteron nuclei and electrons. This collection of ${}^2_1\text{H}$ nuclei and electrons is known as plasma. The nuclei move randomly in the reactor core and occasionally come close enough for nuclear fusion to take place. Usually, the temperature in the reactor core are too high and no material will be used to confine the plasma for a time t_0 before the particles fly away from the core. If n is the density (number per volume) of deuterons, the product nt_0 is called Lawson number. In one of the criteria, a reactor is termed successful if Lawson number is greater than $5 \times 10^{14} \text{ s/cm}^2$.

It may be helpful to use the following Boltzmann constant

$$k = 8.6 \times 10^{-5} \text{ eV/K}, \quad \frac{e^2}{4\pi\epsilon_0} = 1.44 \times 10^{-9} \text{ eV}\cdot\text{m}$$

Assume that two deuteron nuclei in the core of fusion reactor at temperature energy T are moving toward each other, each with kinetic energy $1.5kT$, when the separation between them is large enough to

neglect coulomb potential energy . Also neglect any interaction from other particle in the core . The minimum temperature T required for them to reach a separation of $4 \times 10^{-15} m$ is in the range

A. $1.0 \times 10^9 K < T < 2.0 \times 10^9 K$

B. $2.0 \times 10^9 K < T < 3.0 \times 10^9 K$

C. $3.0 \times 10^9 K < T < 4.0 \times 10^9 K$

D. $4.0 \times 10^9 K < T < 5.0 \times 10^9 K$

Answer: A



Watch Video Solution

3. Scientists are working hard to develop nuclear fusion reactor Nuclei of heavy hydrogen, ${}_1^2H$, known as deuteron and denoted by D , can be thought of as a candidate for fusion reactor . The $D - D$ reaction is ${}_1^2H + {}_1^2H \rightarrow {}_2^4He + n + \text{energy}$. In the core of fusion reactor, a gas of heavy hydrogen of ${}_1^2H$ is fully ionized into deuteron nuclei and electrons. This collection of ${}_1^2H$ nuclei and electrons is known as

plasma . The nuclei move randomly in the reactor core and occasionally come close enough for nuclear fusion to take place. Usually , the temperature in the reactor core are too high and no material will can be used to confine the to plasma for a time t_0 before the particles fly away from the core. If n is the density (number volume) of deuterons , the product nt_0 is called Lawson number. In one of the criteria , a reactor is termed successful if Lawson number is greater then $5 \times 10^{14} s / cm^2$

it may be helpfull to use the following boltzmann constant

$$\lambda = 8.6 \times 10^{-5} eV / k, \frac{e^2}{4\pi s_0} = 1.44 \times 10^{-9} eVm$$

Result of calculations for four different design of a fusion reactor using $D - D$ reaction are given below. which of these is most promising based on Lawson criterion ?

A. Deuteron density = $2.0 \times 10^{12} cm^{-3}$, confinement time = $5.0 \times 10^{-3} s$

B. Deuteron density = $8.0 \times 10^{14} cm^{-3}$, confinement time = $9.0 \times 10^{-1} s$

C. Deuteron density = $4.0 \times 10^{23} \text{ cm}^{-3}$, confinement time
 $= 1.0 \times 10^{-11} \text{ s}$

D. Deuteron density = $2.0 \times 10^{24} \text{ cm}^{-3}$, confinement time
 $= 4.0 \times 10^{-12} \text{ s}$

Answer: B

 [Watch Video Solution](#)

4. The $\beta - \text{decay}$ process, discovered around 1900, is basically the decay of a neutron n . In the laboratory, a proton p and an electron e^- are observed as the decay product of neutron. Therefore considering the decay of neutron as a two-body decay process, it was predicted theoretically that the kinetic energy of the electron should be a constant. But experimentally, it was observed that the electron kinetic energy has continuous spectrum. Considering a three-body decay process, i.e.

$n \rightarrow p + e^- + \bar{\nu}_e$, around 1930, Pauli explained the observed electron energy spectrum. Assuming the anti-neutrino ($\bar{\nu}_e$) to be massless and

possessing negligible energy, and the neutrino to be at rest, momentum and energy conservation principle are applied. From this calculation, the maximum kinetic energy of the electron is $0.8 \times 10^6 \text{ eV}$. The kinetic energy carried by the proton is only the recoil energy.

If the β^- - neutron had a mass of $3eV/c^2$ (where c is the speed of light) instead of zero mass, what should be the range of the kinetic energy K of the electron?

 [Watch Video Solution](#)

5. The β^- - decay process, discovered around 1900, is basically the decay of a neutron n . In the laboratory, a proton p and an electron e^- are observed as the decay product of neutron. Therefore considering the decay of neutron as a two-body decay process, it was predicted theoretically that the kinetic energy of the electron should be a constant. But experimentally, it was observed that the electron kinetic energy has continuous spectrum. Considering a three-body decay process, i.e.

$n \rightarrow p + e^- + \bar{\nu}_e$, around 1930, Pauli explained the observed electron energy spectrum. Assuming the anti-neutrino ($\bar{\nu}_e$) to be massless and

possessing negligible energy, and the neutrino to be at rest, momentum and energy conservation principle are applied. From this calculation, the maximum kinetic energy of the electron is $0.8 \times 10^6 \text{ eV}$. The kinetic energy carried by the proton is only the recoil energy.

What is the maximum energy of the anti-neutrino?

- A. The nucleus ${}^6_3\text{Li}$ can emit an alpha particle
- B. The nucleus ${}^{120}_{84}\text{Po}$ can emit a proton.
- C. Deuteron and alpha particle can undergo complete fusion.
- D. The nuclei ${}^{70}_{30}\text{Zn}$ and ${}^{82}_{34}\text{Se}$ can undergo complete fusion.

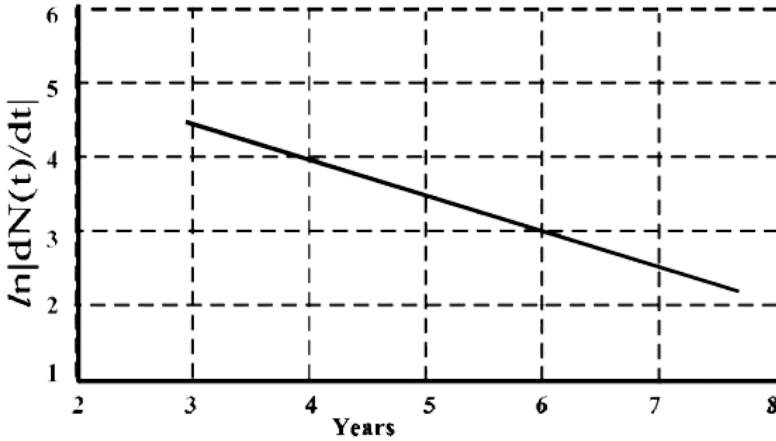
Answer: C



[Watch Video Solution](#)

Integer type

1. To determine the half life of a radioactive element , a student plots a graph of $\ln \left| \frac{dN(t)}{dt} \right|$ versus t , Here $\left| \frac{dN(t)}{dt} \right|$ is the rate of radioactive decay at time t , if the number of radioactive nuclei of this element decreases by a factor of p after 4.16 year the value of p is



[Watch Video Solution](#)

2. The activity of a freshly prepared radioactive sample is 10^{10} disintegrations per second , whose mean life is $10^9 s$ The mass of an atom of this radioisotope is $10^{-25} kg$ The mass (in mg) of the radioactive sample is



Watch Video Solution

3. A freshly prepared sample of a radioisotope of half - life $1386s$ has activity 10^3 disintegrations per second Given that $\ln 2 = 0.693$ the fraction of the initial number of nuclei (expressed in nearest integer percentage) that will decay in the first $80s$ after preparation of the sample is



Watch Video Solution

ddp.5.1

1. The graph between $\log R$ and $\log A$ where R is the nuclear radius and A is the mass number is.

A.

B.

C.

D.

Answer: A



Watch Video Solution

2. The ratio of radii of nuclei ${}_{13}\text{Al}^{27}$ and ${}_{52}\text{X}^A$ is 3:5. The number of neutrons in the nuclei of X will be

A. 52

B. 73

C. 125

D. 13

Answer: B



Watch Video Solution

3. Radius of ${}^4_2\text{He}$ nucleus is 3 Fermi. The radius of ${}^{206}_{82}\text{Pb}$ nucleus will be.

- A. 5 Fermi
- B. 6 Fermi
- C. 11.16 Fermi
- D. 8 Fermi

Answer: C



[Watch Video Solution](#)

4. What is the radius of iodine atom?

(atomic no. 53, mass no. 126)

- A. $2.5 \times 10^{-11}m$
- B. $2.5 \times 10^{-9}m$
- C. $7 \times 10^{-9}m$
- D. $7 \times 10^{-6}m$

Answer: A



[Watch Video Solution](#)

5. A heavy nucleus at rest breaks into two fragments which fly off with velocities in the ratio 8 : 1. The ratio of radii of the fragments is.

A. 1 : 2

B. 1 : 4

C. 4 : 1

D. 2 : 1

Answer: A



[Watch Video Solution](#)

6. Order of magnitude of density of uranium nucleus is (

$$m_p = 1.67 \times 10^{-27} \text{ kg})$$

A. 10^{20} kg/m^3

B. 10^{17} kg/m^3

C. 10^{14} kg/m^3

D. 10^{11} kg/m^3

Answer: B



Watch Video Solution

7. α -particles of energy 400 KeV are bombarded on nucleus of ${}_{82}\text{Pb}$. In scattering of α -particles, its minimum distance from nucleus will be

A. 0.59 nm

B. 0.59 \AA

C. 5.9 \AA

D. 0.59 pm

Answer: D

 [Watch Video Solution](#)

8. For a nucleus to be stable, the correct relation between neutron number N and proton number Z is.

A. $N > Z$

B. $N = Z$

C. $N < Z$

D. $N \geq Z$

Answer: D

 [Watch Video Solution](#)

9. Two nucleons are at a separation of $1 \times 10^{-15} m$. The net force between them is F_1 , if both are neutrons, F_2 if both are protons and F_3 if one is a proton and other is a neutron. In such a case.

A. $F_2 > F_1 > F_3$

B. $F_1 = F_2 = F_3$

C. $F_1 = F_2 > F_3$

D. $F_1 = F_3 > F_2$

Answer: B



Watch Video Solution

10. M_n and M_p represent the mass of neutron and proton respectively. An element having mass M has N neutron and Z -protons, then the correct relation will be :-

A. $M < [NM_n + ZM_p]$

B. $M > [NM_n + ZM_p]$

C. $M = [NM_n + ZM_p]$

D. $M = N[M_n + M_p]$

Answer: A



Watch Video Solution

11. if m , m_n and m_p are the masses of ${}_Z X^A$ nucleus neutron and protons respectively then.

A. $m < (A - Z)m_n + Zm_p$

B. $m = (A - Z)m_n + Zm_p$

C. $m = (A - Z)m_p + Zm_n$

D. $m > (A - Z)m_n + Zm_p$

Answer: A



Watch Video Solution

12. The rest energy of an electron is.

A. 510 KeV

B. 931 KeV

C. 510 MeV

D. 931 MeV

Answer: A

 [Watch Video Solution](#)

13. Let m_p be the mass of a proton , m_n the mass of a neutron, M_1 the mass of a ${}_{10}^{20}\text{Ne}$ nucleus and M_2 the mass of a ${}_{20}^{40}\text{Ca}$ nucleus . Then

A. $M_2 = 2M_1$

B. $M_2 > 2M_1$

C. $M_2 < 2M_1$

D. $M_1 < 10(m_n + m_p)$

Answer: C::D



[Watch Video Solution](#)

14. The mass number of a nucleus is

- A. always less than its atomic number
- B. always greater than its atomic number
- C. sometimes equal to its atomic number
- D. sometimes more than and sometimes equal to its atomic number

Answer: C::D



[Watch Video Solution](#)

ddp.5.2

1. The mass defect in a particular nuclear reaction is 0.3 grams. The amount of energy liberated in kilowatt hours is.

(Velocity of light = $3 \times 10^8 m/s$).

A. 1.5×10^6

B. 2.5×10^6

C. 3×10^6

D. 7.5×10^6

Answer: D



Watch Video Solution

2. If a proton and antiproton come close to each other and annihilate how energy will be released

A. $1.5 \times 10^{-10} J$

B. $3 \times 10^{-10} J$

C. $4.5 \times 10^{-10} J$

D. None of these

Answer: B

 [Watch Video Solution](#)

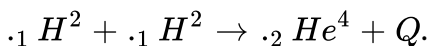
3. Binding energy of a nucleus is.

- A. energy given to its nucleus during its formation
- B. total mass of nucleus converted to energy units
- C. loss of energy from the nucleus during its formation
- D. total K.E. and P.E. of the nucleons in the nucleus

Answer: C

 [Watch Video Solution](#)

4. The binding energies per nucleon for a deuteron and an α – particle are x_1 and x_2 respectively. What will be the energy Q released in the following reaction ?



A. $4(x_1 + x_2)$

B. $4(x_2 = x_1)$

C. $2(x_1 + x_2)$

D. $2(x_2 = x_1)$

Answer: B



Watch Video Solution

5. The curve of binding energy per nucleon as a function of atomic mass number has a sharp peak for helium nucleus. This implies that helium.

A. can easily be broken up

B. is very stable

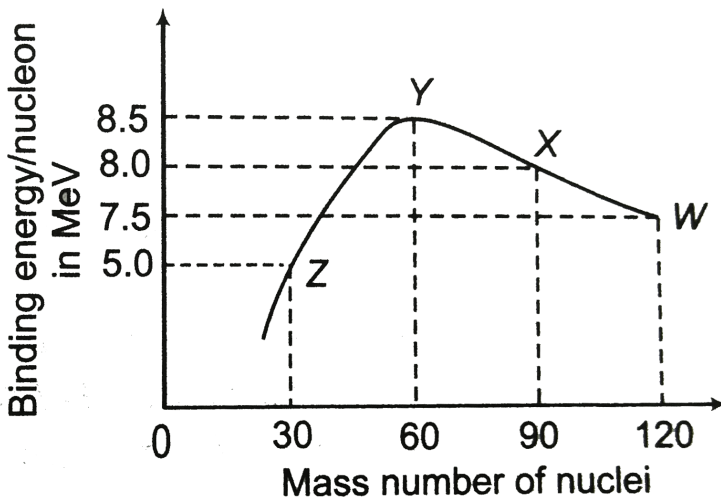
C. can be used as fissionable material

D. is radioactive

Answer: B

6. Binding energy per nucleon versus mass number curve for nuclei is shown in figure. W, X, Y, and Z are four nuclei indicated on the curve. The process that would release energy is

- (a) $Y \rightarrow 2Z$
- (b) $W \rightarrow X + Z$
- (c) $W \rightarrow 2Y$
- (d) $X \rightarrow Y + Z$



A. $Y \rightarrow 2Z$

B. $W \rightarrow X + Z$

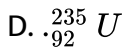
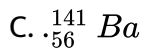
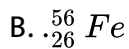
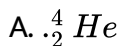
C. $W \rightarrow 2Y$

D. $X \rightarrow Y + Z$

Answer: C

 [Watch Video Solution](#)

7. The binding energy per nucleon is maximum in case of



Answer: B

 [Watch Video Solution](#)

8. the masses of neutron and protons are 1.0087 amu and 1.0073 amu , respectively, if the neutrons and protons combine to form a helium nucleus (alpha particles) of mass 4.0015 amu the binding energy of the helium nucleus will be ($1 \text{ amu} = 931 \text{ MeV}$)

A. 28.4 MeV

B. 20.8 MeV

C. 27.3 MeV

D. 14.2 MeV

Answer: A

 [Watch Video Solution](#)

9. The mass defect for the nucleus of helium is 0.0303 a.m.u. What is the binding energy per nucleon for helium in MeV ?

A. 28

B. 7

C. 4

D. 1

Answer: B



Watch Video Solution

10. m_p denotes the mass of a proton and m_n that of a neutron. A given nucleus of binding energy BE , contains Z protons and N neutrons. The mass $m(N, Z)$ of the nucleus is given by

A. $M(N, Z) = NM_n + ZM_p - Bc^2$

B. $M(N, Z) = NM_n + ZM_p + Bc^2$

C. $M(N, Z) = NM_n + ZM_p - B/c^2$

D. $M(N, Z) = NM_n + ZM_p + B/c^2$

Answer: C

 [Watch Video Solution](#)

11. The binding energy of deuteron 2_1H is 1.112MeV per nucleon and an α - particle 4_2He has a binding energy of 7.047MeV per nucleon. Then in the fusion reaction ${}^2_1H + {}^2_1h \rightarrow {}^4_2He + Q$, the energy Q released is.

A. 1MeV

B. 11.9MeV

C. $23, 8\text{MeV}$

D. 931MeV

Answer: C

 [Watch Video Solution](#)

12. If the binding energy per nucleon in 7_3Li and 4_2He nuclei are respectively 5.60 MeV and 7.06 MeV , then the ebergy of proton in the

reaction ${}_3\text{Li}^7 + p \rightarrow 2{}_2\text{He}^4$ is

A. 19.6MeV

B. 2.4 MeV

C. 8.4MeV

D. 17.3 MeV

Answer: D



[Watch Video Solution](#)

13. Two deuterons undergo nuclear fusion to form a Helium nucleus.

Energy released in this process is : (given binding energy per nucleon for

deuteron = 1.1 MeV and for helium = 7.0 MeV)

A. 19.2 MeV

B. 23.6 MeV

C. 26.9 MeV

D. 13.9MeV

Answer: B



Watch Video Solution

14. A nucleus of ${}_{84}^{210}\text{Po}$ originally at rest emits α particle with speed v .

What will be the recoil speed of the daughter nucleus ?

A. $4v/206$

B. $4v/214$

C. $v/206$

D. $v/214$

Answer: A



Watch Video Solution

15. The binding energy per nucleon of O^{16} is 7.97MeV and that of O^{17} is 7.75MeV . The energy (in MeV) required to remove a neutron from O^{17} is.

- A. 3.52
- B. 3.64
- C. 4.23
- D. 7.86

Answer: C



[Watch Video Solution](#)

ddp.5.3

1. In the disintegration series

${}_{92}^{238}\text{U} \xrightarrow{\alpha} \text{X} \xrightarrow{\beta^-} \text{Y}$ the values of Z and A , respectively, will be

- A. 92236

B. 88230

C. 90234

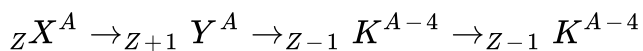
D. 91234

Answer: D



Watch Video Solution

2. In a given reaction,



The radioactive radiations are emitted in the sequence of

A. α, β, γ

B. β, α, γ

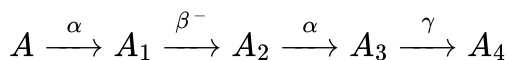
C. γ, α, β

D. β, γ, α

Answer: B

[Watch Video Solution](#)

3. A radioactive nucleus undergoes a series of decay according to the scheme.



If the mass number and atomic number of A are 180 and 72 respectively, what are these numbers for A_4 .

A. 172 and 69

B. 174 and 70

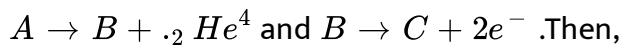
C. 176 and 69

D. 176 and 70

Answer: A

[Watch Video Solution](#)

4. An element A decays into an element C by a two step process



A. A and C are isotopes

B. A and C are isobars

C. A and B are isotopes

D. A and B are isobars

Answer: A



[Watch Video Solution](#)

5. Half-lives of two radioactive substances A and B are respectively 20 min and 40 min. Initially, the samples of A and B have equal number of nuclei. After 80 min the ratio of remaining number of A and B nuclei is

A. 0.0527777777777778

B. 0.1673611111111111

C. 0.0444444444444444

D. 0.0423611111111111

Answer: C



[Watch Video Solution](#)

6. The half-life of ^{131}I is 8days . Given a sample of ^{131}I at time $t = 0$, we can assert that

A. No nucleus will decay before $t = 4$ days

B. No nucleus will decay before $t = 8$ days

C. All nuclei will decay before $t = 16$ days

D. A given nucleus may decay at any time after $t = 0$

Answer: D



[Watch Video Solution](#)

7. At any instant, the ratio of the amount of radioactive substance is 2 : 1. If their half-lives be respectively, 12 h and 16 h then after 2 days, what will be the ratio of the substances?

A. 0.0423611111111111

B. 0.0840277777777778

C. 0.0430555555555556

D. 0.0444444444444444

Answer: A



[Watch Video Solution](#)

8. During mean life of a radioactive element, the fraction that disintegrates is

A. e

B. $\frac{1}{e}$

C. $\frac{e-1}{e}$

D. $\frac{e}{e-1}$

Answer: C



Watch Video Solution

9. The activity of a sample of radioactive material is R_1 at time t_1 and R_2 at time t_2 ($t_2 > t_1$). Its mean life is T . Then,

A. $A_1 t_1 = A_2 t_2$

B. $A_1 - A_2 = t_2 - t_1$

C. $A_2 = A_1 e^{(t_1 - t_2) / T}$

D. $A_2 = A_1 e^{(t_1 / t_2) / T}$

Answer: C



Watch Video Solution

10. The half-life of a sample of a radioactive substance is 1 h. If 8×10^{10} atoms are present at $t=0$, then the number of atoms decayed in the duration $t=2$ h to $t=4$ will be

A. 2×10^{10}

B. 1.5×10^{10}

C. Zero

D. Infinity

Answer: B



[Watch Video Solution](#)

11. In the case of thorium ($A = 232$ and $Z = 90$), we obtain an isotope of lead ($A = 208$ and $Z = 82$) after some radioactive disintegrations. The number of α - and β -particles emitted are, respectively,

A. $\alpha = 3, \beta = 3$

B. $\alpha = 6, \beta = 4$

C. $\alpha = 6, \beta = 0$

D. $\alpha = 4, \beta = 6$

Answer: B



Watch Video Solution

12. A sample contains $16gm$ of radioactive material, the half-life of which is two days. After 32 days, the amount of radioactive material left in the sample is

A. $< 1mg$

B. $\frac{1}{4}gm$

C. $\frac{1}{2}gm$

D. $1gm$

Answer: A



Watch Video Solution

13. A radio-isotope has a half-life of 5 year. The fraction of the atoms of this material that would decay in 15 years will be

A. $1/8$

B. $2/3$

C. $7/8$

D. $5/8$

Answer: C



Watch Video Solution

14. Three α – particle and one β – particle decaying takes place in series from an isotope ${}_{88}\text{Ra}^{238}$. Finally the isotope obtained will be.

A. ${}_{84}\text{X}^{220}$

B. $.86 X^{222}$

C. $.83 X^{226}$

D. $.83 X^{215}$

Answer: C

 [Watch Video Solution](#)

15. Radon (R_a) decays into Polonium (P_0) by emitting an α – particle with half-life of 4 days. A sample contains 6.4×10^{10} atoms of R_a . After 12 days, the number of atoms of R_a left in the sample will be

A. 3.2×10^{10}

B. 0.53×10^{10}

C. 2.1×10^{10}

D. 0.8×10^{10}

Answer: D



Watch Video Solution

ddp.5.4

1. If 10 % of a radioactive material decays in 5 days, then the amount of original material left after 20 days is approximately

A. 0.6

B. 0.65

C. 0.7

D. 0.75

Answer: B



Watch Video Solution

2. A radioactive isotope X with a half-life of 1.37×10^9 yr decays to Y which is stable. A sample of rock from the moon was found to contain

both the elements X and Y which were in the ratio of 1 : 7. The age of the rock is

A. 1.96×10^8 years

B. 3.85×10^9 years

C. 4.11×10^9 years

D. 9.59×10^9 years

Answer: C



Watch Video Solution

3. The half-life of radium is 1620 years and its atomic weight is 226. The number of atoms that will decay from its 1 g sample per second will be .

A. 3.61×10^{10}

B. 3.6×10^{12}

C. 3.11×10^{15}

D. 31.1×10^{15}

Answer: A



[Watch Video Solution](#)

4. A radioactive material decays by simultaneous emission of two particles from the with respective half - lives 1620 and 810 year . The time , in year , after which one - fourth of the material remains is

A. 1080

B. 2430

C. 3240

D. 4860

Answer: A



[Watch Video Solution](#)

5. For a substance, the average life for α – emission is 1620 yr and β – emission is 405 yr. After how much time the $\frac{1}{4}$ of the material remains after α and β – emission

- A. 1500 years
- B. 300 years
- C. 449 years
- D. 810 years

Answer: C

 [Watch Video Solution](#)

6. A radioactive nucleus undergoes α – emission to form a stable element. What will be the recoil velocity of the daughter nucleus if V is the velocity of α -emission and A is the atomic mass of radioactive nucleus ?

A. $\frac{4V}{A - 4}$

B. $\frac{2V}{A - 4}$

C. $\frac{4V}{A + 4}$

D. $\frac{2V}{A + 4}$

Answer: A



Watch Video Solution

7. Half-life of a radioactive substance is 20 min. Difference between points of time when it is 33% disintegrated and 67% disintegrated is approximately

A. 10 min

B. 20 min

C. 30 min

D. 40 min

Answer: B



[Watch Video Solution](#)

8. A and B are two radioactive substances whose half-lives are 1 and 2 yr, respectively. Initially 10g of A and 1 g of B is taken. The time (approximate) after which they will have same quantity remaining is

A. 6.62 years

B. 5 years

C. 3.2 years

D. 7 years

Answer: A



[Watch Video Solution](#)

9. Half-life of a radioactive substance is 20 min. The time between 20% and 80% decay will be

A. 20 minutes

B. 40 minutes

C. 30 minutes

D. 25 minutes

Answer: B



[Watch Video Solution](#)

10. The excitation energy of a hydrogen like ion to its first excited state is 40.8 eV. The energy needed to remove the electron from the ion in the ground state is

A. 54.4 eV

B. 13.6 eV

C. 40.8 eV

D. 27.2 eV

Answer: A



Watch Video Solution

11. The rate of disintegration was observed to be 10^{17} disintegrations per sec when its half life period is 1445 years. The original number of particles are.

A. 8.9×10^{27}

B. 6.6×10^{27}

C. 1.4×10^{16}

D. 1.2×10^{17}

Answer: B



Watch Video Solution

12. A small quantity of solution containing Na^{24} radio nuclide of activity 1 microcurie is injected into the blood of a person. A sample of the blood of volume 1cm^3 taken after 5 h shows an activity of 296 disintegration per minute. What will be the total value of the blood in the person? Assume that the radioactive solution mixes uniformly in the blood of the person. (Take, 1 curie = 3.7×10^{10} disintegration per second and $e^{-\lambda t} = 0.7927$, where λ = disintegration constant)

A. 5.94 L

B. 2L

C. 317 L

D. 1 L

Answer: A



Watch Video Solution

13. A radioactive sample of ${}^{238}\text{U}$ decay to Pb through a process for which the half is 4.5×10^9 year. Find the ratio of number of nuclei of Pb to ${}^{238}\text{U}$ after a time of 1.5×10^9 year Given $(2)^{1/3} = 1.26$

- A. 0.12
- B. 0.26
- C. 1.2
- D. 0.37

Answer: B



[Watch Video Solution](#)

14. A radioactive sample is α – emitter with half life 138.6 days is observed by a student to have 2000 disintegration/sec. The number of radioactive nuclei for given activity are.

- A. 3.45×10^{10}

B. 1×10^{10}

C. 3.45×10^{15}

D. 2.75×10^{11}

Answer: A

 [Watch Video Solution](#)

15. If one starts with one curie of radioactive substance ($T_{1/2} = 12hrs$) the activity left after a period of 1 week will be about

A. 1 curie

B. 120 microcurie

C. 60 microcurie

D. 8 millicurie

Answer: C

 [Watch Video Solution](#)

1. An atomic Power station has a generating capacity of 200MW . The energy generated in a day by this station is.

- A. 200 MW
- B. 200 J
- C. $4800 \times 10^6\text{ J}$
- D. $1728 \times 10^{10}\text{ J}$

Answer: D



[Watch Video Solution](#)

2. 200MeV of energy may be obtained per fission of U^{235} . A reactor is generating 1000kW of power. The rate of nuclear fission in the reactor is.

A. 1000

B. 2×10^8

C. 3.125×10^{16}

D. 931

Answer: C



Watch Video Solution

3. If $200MeV$ energy is released in the fission of a single U^{235} nucleus, the number of fissions required per second to produce 1 kilowatt power shall be (Given $1eV = 1.6 \times 10^{-19}J$).

A. 3.125×10^{13}

B. 3.125×10^{14}

C. 3.125×10^{15}

D. 3.125×10^{16}

Answer: A



[Watch Video Solution](#)

4. Energy released in the fission of a single ${}_{92}\text{U}^{235}$ nucleus is 200 MeV. The fission rate of a ${}_{92}\text{U}^{235}$ filled reactor operating at a power level of 5W is

A. $1.56 \times 10^{+10} \text{ s}^{-1}$

B. $1.56 \times 10^{+11} \text{ s}^{-1}$

C. $1.56 \times 10^{+16} \text{ s}^{-1}$

D. $1.56 \times 10^{+17} \text{ s}^{-1}$

Answer: B



[Watch Video Solution](#)

5. If a proton and anti-proton come close to each other and annihilate, how much energy will be released ?

A. $1.5 \times 10^{-10} J$

B. $3 \times 10^{-10} J$

C. $4.5 \times 10^{-10} J$

D. None of these

Answer: B



[Watch Video Solution](#)

6. Energy released in fusion of $1kg$ of deuterium nuclei.

A. $8 \times 10^{13} J$

B. $3 \times 10^{27} J$

C. $2 \times 10^7 kWh$

D. $8 \times 10^{23} MeV$

Answer: A



Watch Video Solution

7. If the energy released in the fission of the nucleus is 200MeV . Then the number of nuclei required per second in a power plant of 16kW will be.

A. 0.5×10^{14}

B. 0.5×10^{12}

C. 5×10^{12}

D. 5×10^{14}

Answer: D



Watch Video Solution

8. To generate a power of 3.2 mega watt, the number of fissions of U^{235} per minute is.

(Energy released per fission = 200MeV , $1\text{eV} = 1.6 \times 10^{-19}\text{J}$).

A. 6×10^{18}

B. 6×10^{17}

C. 10^{17}

D. 6×10^{16}

Answer: A



[Watch Video Solution](#)

9. Two deuterons undergo nuclear fusion to form a Helium nucleus.

Energy released in this process is : (given binding energy per nucleon for

deuteron = 1.1MeV and for helium = 7.0MeV)

A. 19.2MeV

B. 23.6MeV

C. 26.9MeV

D. 13.9MeV

Answer: B



[Watch Video Solution](#)

10. What is the energy released by fission of 1 g of U^{235} ? (Assume 200 MeV energy is liberated on fission of 1 nucleus)

A. $8.2 \times 10^{10} J$

B. $8.2 \times 10^9 J$

C. $8.2 \times 10^{13} J$

D. $8.2 \times 10^{16} J$

Answer: C



[Watch Video Solution](#)

11. The nuclear reaction ${}^2_1\text{H} + {}^2_1\text{H} \rightarrow {}^4_2\text{He}$ (mass of deuteron = $2.0141 a. m. u$ and mass of $\text{He} = 4.0024 a. m. u$) is

- A. fusion reaction releasing 24MeV energy
- B. fusion reaction absorbing 24MeV energy
- C. fission reaction releasing 0.0258MeV energy
- D. fission reaction absorbing 0.0258MeV energy

Answer: A



[Watch Video Solution](#)

12. Fission of nuclei is possible because the binding energy per nucleon in them

- A. increases with mass number at high mass numbers
- B. decreases with mass number at low mass numbers
- C. increases with mass number at low mass numbers

D. decreases with mass number at low mass numbers

Answer: B

 [Watch Video Solution](#)

13. An atomic power nuclear reactor can deliver 300 MW. The energy released due to fission of each nucleus of uranium atoms U^{238} is 170 MeV.

The number of uranium atoms fissioned per hour will be

A. 30×10^{25}

B. 4×10^{22}

C. 10×10^{20}

D. 5×10^{15}

Answer: B

 [Watch Video Solution](#)

a.	Connecting link between plants and animals	(i)	Acrasin
b.	Bioluminescence granules	(ii)	Paramylum
c.	Jewels of plant kingdom	(iii)	Mesokaryon
d.	Communal protistan	(iv)	Auxospore

14.



[Watch Video Solution](#)