



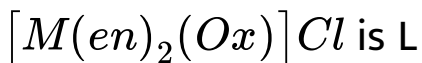
CHEMISTRY

NCERT - FULL MARKS CHEMISTRY(TAMIL)

COORDINATION CHEMISTRY

Evaluation Choose The Correct Answer

1. The sum of primary valance and secondary valance of the metal M in the complex



A. 3

B. 6

C. - 3

D. 9

Answer: D



View Text Solution

2. An excess of silver nitrate is added to 100ml of a 0.01M solution of pentaquachloridochromium(III)chloride. The number of moles of AgCl precipitated would be

A. 0.02

B. 0.002

C. 0.01

D. 0.2

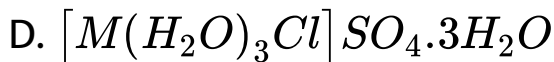
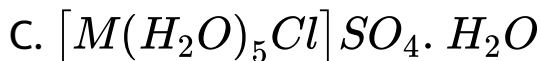
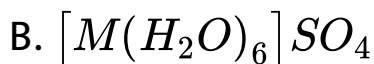
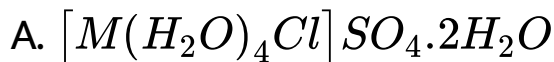
Answer: B



View Text Solution

3. A complex has a molecular formula $MSO_4Cl \cdot 6H_2O$. The aqueous solution of it gives white precipitate with Barium chloride solution and no precipitate is obtained when it is treated with

silver nitrate solution. If the secondary valence of the metal is six, which one of the following correctly represents the complex?



Answer: C



View Text Solution

4. Oxidation state of Iron and the charge on the ligand NO in $[Fe(H_2O)_5NO]SO_4$ are

- A. + 2 and 0 respectively
- B. + 3 and 0 respectively
- C. + 3 and -1 respectively
- D. + 1 and +1 respectively

Answer: D



View Text Solution

5. As per IUPAC guidelines, the name of the complex



A. chlorobisethylenediaminenitritocobalt(III)

chloride

B. chloridobis(ethane-1,2-diamine)nitro -

Ocobaltate(III) chloride

C. chloridobis(ethane-1,2-diammine)nitrito -

Ocobalt(II) chloride

D. chloridobis(ethane-1,2-diamine)nitro -

Ocobalt(III) chloride

Answer: D



View Text Solution

6. IUPAC name of the complex $K_3 [Al(C_2O_4)_3]$ is

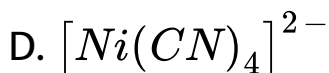
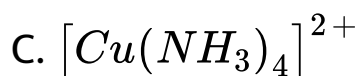
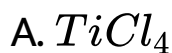
- A. potassiumtrioxalatoaluminium(III)
- B. potassiumtrioxalatoaluminate(II)
- C. potassiumtrisoxalatoaluminate(III)
- D. potassiumtrioxalatoaluminate(III)

Answer: D



View Text Solution

7. A magnetic moment of 1.73BM will be shown by one among the following



Answer: C



View Text Solution

8. Crystal field stabilization energy for high spin d^5 octahedral complex is

A. $-0.6\Delta_0$

B. 0

C. $2(P - \Delta_0)$

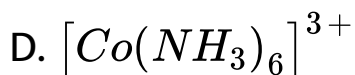
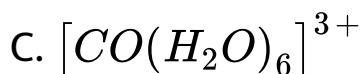
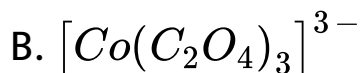
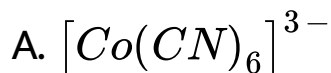
D. $2(P + \Delta_0)$

Answer: B



View Text Solution

9. In which of the following coordination entities the magnitude of Δ_0 will be maximum?

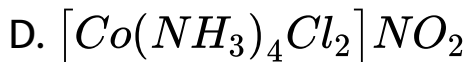
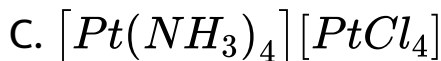
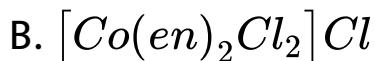
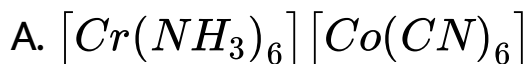


Answer: A



View Text Solution

10. Which one of the following will give a pair of enantiomorphs?



Answer: B



View Text Solution

11. Which type of isomerism is exhibited by $[Pt(NH_3)_2Cl_2]$?

- A. Coordination isomerism
- B. Linkage isomerism
- C. Optical isomerism
- D. Geometrical isomerism

Answer: D



View Text Solution

12. How many geometrical isomers are possible for

$\text{C}_2\text{H}_2\text{Cl}_2$?

A. 3

B. 4

C. 0

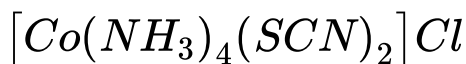
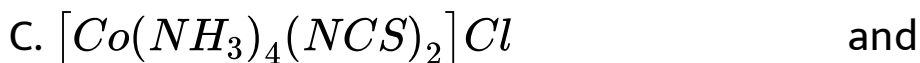
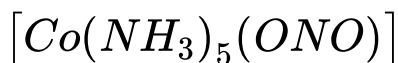
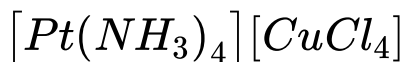
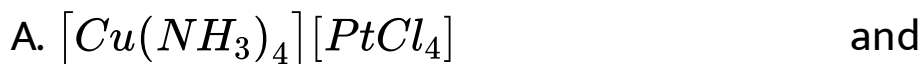
D. 15

Answer: A



View Text Solution

13. Which one of the following pairs represents linkage isomers?



D. both (b) and (c)

Answer: C



[View Text Solution](#)

14. Which kind of isomerism is possible for a complex $\text{[Co(en)}_2\text{Cl)}_2^+$?

A. geometrical and ionization

B. geometrical and optical

C. optical and ionization

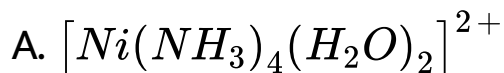
D. geometrical only

Answer: A

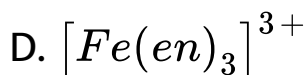
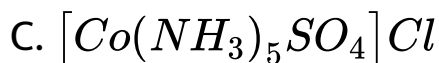


[View Text Solution](#)

15. Which one of the following complexes is not expected to exhibit isomerism?



B. $< < \text{EVA041.eps} > >$

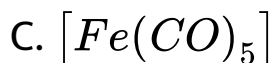
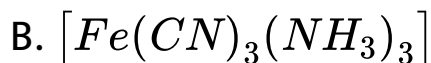
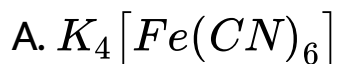


Answer: D



View Text Solution

16. A complex in which the oxidation number of the metal is zero is



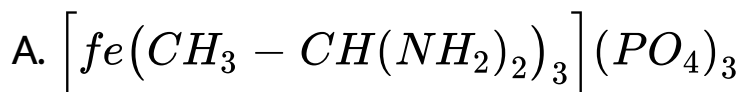
D. both (b) and (c)

Answer: C

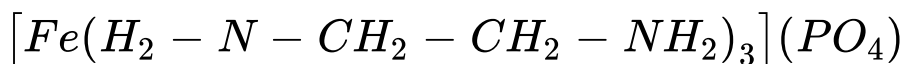


View Text Solution

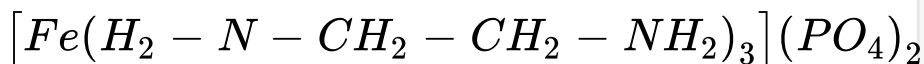
17. Formula of tris(ethane-1,2-diamine)iron(II)phosphate



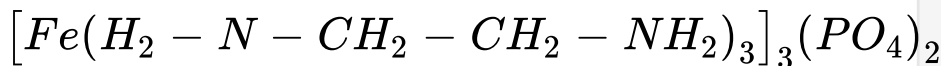
B.



C.



D.

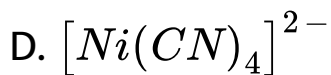
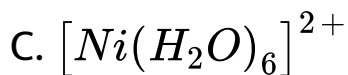
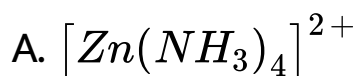


Answer: D



[View Text Solution](#)

18. Which of the following is paramagnetic in nature?

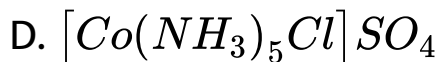
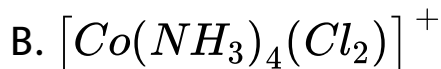
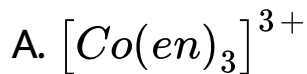


Answer: C



[View Text Solution](#)

19. Fac-mer isomerism is shown by



Answer: C



[View Text Solution](#)

20. Choose the correct statement.

A. Square planar complexes are more stable than octahedral complexes

B. The spin only magnetic moment of

$[Cu(Cl)_4]^{2-}$ is 1.732 BM and it has square

planar structure.

C. Crystal field splitting energy (Δ_0) of

$[FeF_6]^{4-}$ is higher than the (Δ_0) of

$[Fe(CN)_6]^{4-}$

D. Crystal field stabilization energy of

$[V(H_2O)_6]^{2+}$ is higher than the crystal field

stabilization of $[Ti(H_2O)_6]^{2+}$

Answer: D



View Text Solution