



REASONING

BOOKS - KIRAN PUBLICATION

CLASSIFICATION

TYPE-I

1. Which words of the following do not have the same relationship as between the words CHARITABLE and SELFISH ?

A. ILLUMINATE and DAR-KEN

B. ADHERE and STICK TO

C. CHASTE and IMMORAL

D. SADISTIC and KINDHE ARTED

Answer: B



Watch Video Solution

2. Find the odd word pair from the given responses.

Which of the following word pair is not related

in the same way as RETURNABLE' and 'NATURAL'?

A. RECIPROCAL and ORACLE

B. RECONSTRUCT and COUNTER

C. DEPARTMENT and MODERATE

D. EVALUATION and VIOLENT

Answer: C



Watch Video Solution

3. Find the odd word pair from the given responses.

A. Withdrawal

B. Deduction

C. Deposit

D. Debit

Answer: C



Watch Video Solution

4. Find the odd word pair from the given responses.

A. Pond-Lake

B. Pistol-Gun

C. Car-Bus

D. Church-Monument

Answer: D



Watch Video Solution

5. Find the odd word pair from the given responses.

A. Insurance

B. Provident Fund

C. Salary

D. Shares

Answer: C



Watch Video Solution

6. Find the odd word pair from the given responses.

A. Mizoram

B. Sikkim

C. Kohima

D. Manipur

Answer: C



Watch Video Solution

7. Find the odd word pair from the given responses.

A. Amoeba

B. Bacteria

C. Germs

D. Microbes

Answer: A



Watch Video Solution

8. Find the odd word pair from the given responses.

A. Herring

B. Shark

C. Barracuda

D. Whale

Answer: D



Watch Video Solution

9. Find the odd word pair from the given responses.

A. Abundance

B. Plentiful

C. Copious

D. Ample

Answer: D



Watch Video Solution

10. Find the odd word pair from the given responses.

A. node

B. abode

C. shy

D. across

Answer: C



Watch Video Solution

11. Find the odd word pair from the given responses.

A. Microbe

B. Microfilm

C. Microphone

D. Microscope

Answer: A



Watch Video Solution

12. Find the odd word pair from the given responses.

A. Sociologist

B. Economist

C. Neurologist

D. Educationist

Answer: C



Watch Video Solution

13. Find the odd word pair from the given responses.

A. Sweet

B. Bitter

C. Salty

D. Insipid

Answer: D



Watch Video Solution

14. Find the odd word pair from the given responses.

A. Lion

B. Goat

C. Tortoise

D. Centaur

Answer: D



Watch Video Solution

15. Find the odd word pair from the given responses.

A. Square

B. Circle

C. Rectangle

D. Triangle

Answer: B



Watch Video Solution

16. Find the odd word pair from the given responses.

A. Cotton

B. Terene

C. Silk

D. Wool

Answer: B



Watch Video Solution

17. Find the odd word pair from the given responses.

A. Light

B. Wave

C. Heat

D. Sound

Answer: B



Watch Video Solution

18. Find the odd word pair from the given responses.

A. Distinguish

B. Scatter

C. Differentiate

D. Classification

Answer: D



Watch Video Solution

19. Find the odd word pair from the given responses.

A. Mother

B. Grandfather

C. Father

D. Wife

Answer: D



Watch Video Solution

20. Find the odd word pair from the given responses.

A. Foreward

B. Text

C. Index

D. Preface

Answer: B



Watch Video Solution

21. Find the odd word pair from the given responses.

A. House

B. Apartment

C. Building

D. Society

Answer: D



Watch Video Solution

22. Find the odd word pair from the given responses.

A. Crime-Blame

B. Short-Long

C. Poor-Rich

D. Light-Heavy

Answer: A



Watch Video Solution

23. Find the odd word pair from the given responses.

A. Plant-Flower

B. Chair-Sofa

C. Face-Eye

D. Tree-Stem

Answer: B



Watch Video Solution

24. Find the odd word pair from the given responses.

A. Kennel

B. Stable

C. Lock

D. Den

Answer: C



Watch Video Solution

25. Find the odd word pair from the given responses.

A. Telephone

B. Tape-Recorder

C. Transistor

D. Telescope

Answer: D



Watch Video Solution

26. Find the odd word pair from the given responses.

A. Glue

B. Oil

C. Paste

D. Cement

Answer: B



Watch Video Solution

27. Find the odd word pair from the given responses.

A. Paper : Pencil

B. Head : Cap

C. Ink : Inkpot

D. Present : Wrapper

Answer: A



Watch Video Solution

28. Find the odd word pair from the given responses.

A. Sky - Stars

B. Moon - Planets

C. Stadium - Players

D. University - Students

Answer: B



Watch Video Solution

29. Find the odd word pair from the given responses.

A. Troop

B. Group

C. Mob

D. Class

Answer: C



Watch Video Solution

30. Find the odd word pair from the given responses.

A. Tomato

B. Potato

C. Carrot

D. Onion

Answer: A



Watch Video Solution

31. Find the odd word pair from the given responses.

A. Liver

B. Lungs

C. Kidney

D. Ear

Answer: D



Watch Video Solution

32. Find the odd word pair from the given responses.

A. Terrylenne

B. Nylon

C. Cotton

D. Polyester

Answer: C



Watch Video Solution

33. Find the odd word pair from the given responses.

A. MIZORAM

B. SIKKIM

C. KOHIMA

D. MANIPUR

Answer: C



Watch Video Solution

34. Find the odd word pair from the given responses.

A. Pond - Lake

B. Pistol - Gun

C. Car - Bus

D. Charch - Monument

Answer: D



Watch Video Solution

35. Find the odd word pair from the given responses.

A. Analysis

B. Search

C. Conclusion

D. Investigation

Answer: C



Watch Video Solution

36. Find the odd word pair from the given responses.

A. Reward : Punishment

B. Object : Permit

C. Sharp : Blunt

D. Cold : Cool

Answer: D



Watch Video Solution

37. Find the odd word pair from the given responses.

A. Newspaper

B. Press

C. Edition

D. Audition

Answer: D



Watch Video Solution

38. Find the odd word pair from the given responses.

A. Microbe

B. Microfilm

C. Microphone

D. Microscope

Answer: A



Watch Video Solution

39. Find the odd word pair from the given responses.

A. Gupta dynasty

B. Nanda dynasty

C. Maurya dynasty

D. Chola dynasty

Answer: D



Watch Video Solution

40. Find the odd word pair from the given responses.

A. Vayudoot

B. Pushkar

C. Indian Airlines

D. Air India

Answer: D



Watch Video Solution

41. Find the odd word pair from the given responses.

A. Andaman-Nicobar

B. Pondicherry

C. Delhi

D. Goa

Answer: C



Watch Video Solution

42. Find the odd word pair from the given responses.

A. Violent

B. Blue

C. Green

D. White

Answer: D



Watch Video Solution

43. Find the odd word pair from the given responses.

A. Harmless

B. Guilty

C. Innocent

D. Fearless

Answer: B



Watch Video Solution

44. Find the odd word pair from the given responses.

A. (a) Diptheria

B. (b) Cataract

C. (c) Whooping

D. (d) Encephalitis

Answer: B



Watch Video Solution

45. Find the odd word pair from the given responses.

A. Wool

B. Feather

C. Hair

D. Grass

Answer: D



Watch Video Solution

46. Find the odd word pair from the given responses.

A. Sports : Ground

B. Cinema: Screen

C. Drama : Stage

D. Rubber : Erase

Answer: D



Watch Video Solution

47. Find the odd word pair from the given responses.

A. Conceal

B. Divulge

C. Cover

D. Hide

Answer: B



Watch Video Solution

48. Find the odd word pair from the given responses.

A. Pistol

B. Sword

C. Gun

D. Rifle

Answer: B



Watch Video Solution

49. Find the odd word pair from the given responses.

A. Aeroplane

B. Bird

C. Tanker

D. Parachute

Answer: C



Watch Video Solution

50. Find the odd word pair from the given responses.

A. DICTAPHONE

B. GRAMAPHONE

C. MICROPHONE

D. TELEPHONE

Answer: A



Watch Video Solution

51. Find the odd word pair from the given responses.

A. Running

B. Swimming

C. Dancing

D. Breathing

Answer: D



Watch Video Solution

52. Find the odd word pair from the given responses.

A. Quiet - Calm

B. Seldom - Never

C. Peace - Tranquil

D. Rapid - Slow

Answer: D



Watch Video Solution

53. Find the odd word pair from the given responses.

A. Reject

B. Refuse

C. Renounce

D. Redeem

Answer: D



Watch Video Solution

54. Find the odd word pair from the given responses.

A. Skin

B. Nose

C. Ear

D. Kidney

Answer: D



Watch Video Solution

55. Find the odd word pair from the given responses.

A. Jungle

B. Forest

C. Woods

D. Animals

Answer: D



Watch Video Solution

56. Find the odd word pair from the given responses.

A. Fashion - style

B. Fond - affectionate

C. Old-ancient

D. Master - servant

Answer: D



Watch Video Solution

57. Find the odd word pair from the given responses.

A. Dinosaur

B. Sphinx

C. Unicorn

D. Mermaid

Answer: A



Watch Video Solution

58. Find the odd word pair from the given responses.

A. Intimacy

B. Attachment

C. Friendship

D. Enmity

Answer: D



Watch Video Solution

59. Find the odd word pair from the given responses.

A. (a) Diligent

B. (b) Dignified

C. (c) Dissident

D. (d) Devoted

Answer: C



Watch Video Solution

60. Find the odd word pair from the given responses.

A. Earthquake

B. Storm

C. Drought

D. Explosion

Answer: D



Watch Video Solution

61. Find the odd word pair from the given responses.

A. Gallon

B. Pound

C. Ton

D. Kilogram

Answer: A



Watch Video Solution

62. Find the odd word pair from the given responses.

A. Ink

B. Paper

C. Office

D. Pen

Answer: C



Watch Video Solution

63. Find the odd word pair from the given responses.

A. Heat

B. Light

C. Bulb

D. Electricity

Answer: C



Watch Video Solution

64. Find the odd word pair from the given responses.

A. Wave

B. Current

C. Tide

D. Storm

Answer: C



Watch Video Solution

65. Find the odd word pair from the given responses.

A. Room

B. Chamber

C. Veranda

D. Cabin

Answer: C



Watch Video Solution

66. Find the odd word pair from the given responses.

A. Mouth Organ

B. Electric Guitar

C. Keyboard

D. Sonata

Answer: C



Watch Video Solution

67. Find the odd word pair from the given responses.

A. Wolf

B. Cat

C. Dog

D. Fox

Answer: B



Watch Video Solution

68. Find the odd word pair from the given responses.

A. Wheat

B. Rice

C. Jowar

D. Beans

Answer: D



Watch Video Solution

69. Find the odd word pair from the given responses.

A. Garden - Gardener

B. Song-Singer

C. Art - Artist

D. Dance-Dancer

Answer: A



Watch Video Solution

70. Find the odd word pair from the given responses.

A. Hindi

B. Tamil

C. Punjabi

D. Urdu

Answer: D



Watch Video Solution

71. Find the odd word pair from the given responses.

A. Confluence

B. Concourse

C. Radiation

D. Concentration

Answer: C



Watch Video Solution

72. Find the odd word pair from the given responses.

A. Long - Short

B. Black - White

C. Head - Cap

D. Friend - Foe

Answer: C



Watch Video Solution

73. Find the odd word pair from the given responses.

A. Insurance

B. Provident

C. Salary

D. Shares

Answer: C



Watch Video Solution

74. Find the odd word pair from the given responses.

A. (a) Play - Actor

B. (b) Building - Architect

C. (c) Craft - Artisan

D. (d) Cloth -Skirt

Answer: D



Watch Video Solution

75. Find the odd word pair from the given responses.

A. Swimming

B. Sailing

C. Diving

D. Driving

Answer: D



Watch Video Solution

76. Find the odd word pair from the given responses.

A. (a) Perception

B. (b) Discernment

C. (c) Penetration

D. (d) Insinuation

Answer: D



Watch Video Solution

77. Find the odd word pair from the given responses.

A. (a) Softball

B. (b) Baseball

C. (c) Cricket

D. (d) Basketball

Answer: D



Watch Video Solution

78. Find the odd word pair from the given responses.

A. (a) Annoy

B. (b) Distress

C. (c) Harass

D. (d) Ravage

Answer: D



Watch Video Solution

79. Find the odd word pair from the given responses.

A. (a) Tomato

B. (b) Potato

C. (c) Carrot

D. (d) Onion

Answer: A



Watch Video Solution

80. Find the odd word pair from the given responses.

A. (a) Flute

B. (b) Violin

C. (c) Guitar

D. (d) Sitar

Answer: A



Watch Video Solution

81. Find the odd word pair from the given responses.

A. (a) Prod

B. (b) Sap

C. (c) Jab

D. (d) Thrust

Answer: B



Watch Video Solution

82. Find the odd word pair from the given responses.

A. (a) Ladder

B. (b) Staircase

C. (c) Bridge

D. (d) Escalator

Answer: C



Watch Video Solution

83. Find the odd word pair from the given responses.

A. Talking

B. Walking

C. Sleeping

D. Running

Answer: C



Watch Video Solution

84. Find the odd word pair from the given responses.

A. (a) Gallon

B. (b) Ton

C. (c) Quintal

D. (d) Kilogram

Answer: A



Watch Video Solution

85. Find the odd word pair from the given responses.

A. (a) Ring

B. (b) Tyre

C. (c) Plate

D. (d) Bangle

Answer: C



Watch Video Solution

86. Find the odd word from the given responses.

A. (a) Eyes

B. (b) Ears

C. (c) Throat

D. (d) Skin

Answer: C



Watch Video Solution

87. Find the odd word pair from the given responses.

A. Blind

B. Dumb

C. Deaf

D. Idiot

Answer: D



Watch Video Solution

88. Find the odd word pair from the given responses.

A. (a) Potato

B. (b) Tomato

C. (c) Cauliflower

D. (d) Brinjal

Answer: A



Watch Video Solution

89. Find the odd word pair from the given responses.

A. (a) Calf

B. (b) Bitch

C. (c) Kitten

D. (d) Cub

Answer: B



Watch Video Solution

90. Find the odd word from the given responses.

A. Save

B. Spill

C. Spend

D. Squander

Answer: A



Watch Video Solution

91. Find the odd word pair from the given responses.

A. (a) 14th November

B. (b) 15th August

C. (c) 26th January

D. (d) 2nd October

Answer: C



Watch Video Solution

92. Find the odd word pair from the given responses.

A. Sword

B. Dagger

C. Rifle

D. Knife

Answer: C



Watch Video Solution

93. Find the odd word pair from the given responses.

A. Violin

B. Veena

C. Sitar

D. Sexaphone

Answer: D



Watch Video Solution

94. Find the odd word pair from the given responses.

A. Kerala

B. Karnataka

C. Andhra Pradesh

D. Jammu

Answer: D



Watch Video Solution

95. Find the odd word pair from the given responses.

A. Plant

B. Root

C. Stem

D. Leaf

Answer: A



Watch Video Solution

96. Find the odd word pair from the given responses.

A. Prison

B. Court

C. Handcuffs

D. Uniform

Answer: D



Watch Video Solution

97. Find the odd word pair from the given responses.

A. Nile

B. Lien

C. Lien

D. Lean

Answer: D



Watch Video Solution

98. Find the odd word pair from the given responses.

A. River

B. Canal

C. Stream

D. Pond

Answer: D



Watch Video Solution

99. Find the odd word pair from the given responses.

A. Duck

B. Sparrow

C. Pigeon

D. Cock

Answer: A



Watch Video Solution

100. Find the odd word pair from the given responses.

A. January

B. March

C. July

D. September

Answer: D



Watch Video Solution

101. Find the odd word pair from the given responses.

A. Spectacles

B. Dentures

C. Clutches

D. Plasters

Answer: C



Watch Video Solution

102. Find the odd word pair from the given responses.

A. Goat

B. Lion

C. Horse

D. Cow

Answer: B



Watch Video Solution

103. Find the odd word pair from the given responses.

A. Book

B. Magazine

C. Journal

D. Paper

Answer: D



Watch Video Solution

104. Find the odd word pair from the given responses.

A. Kilometre

B. Kilogram

C. Furlong

D. Yard

Answer: B



Watch Video Solution

105. Find the odd word pair from the given responses.

A. Onion

B. Tomato

C. Potato

D. Carrot

Answer: B



Watch Video Solution

106. Find the odd word pair from the given responses.

A. Bottle

B. Milk

C. Water

D. Oil

Answer: A



Watch Video Solution

107. Find the odd word from the given responses.

A. (a) Bicycle

B. (b) Scooter

C. (c) Moped

D. (d) Motor-cycle

Answer: A



Watch Video Solution

108. Find the odd word pair from the given responses.

A. Hate

B. Love

C. Anger

D. Cry

Answer: D



Watch Video Solution

109. Find the odd word pair from the given responses.

A. (a) Socks

B. (b) Bangles

C. (c) Gloves

D. (d) Wrist-watch

Answer: A



Watch Video Solution

110. Find the odd word from the given responses.

A. (a) January

B. (b) February

C. (c) July

D. (d) December

Answer: B



Watch Video Solution

111. Find the odd word pair from the given responses.

A. (a) Rose

B. (b) Jasmine

C. (c) Lily

D. (d) Lotus

Answer: D



Watch Video Solution

112. Find the odd word pair from the given responses.

A. Sari

B. Frock

C. Skirt

D. Turban

Answer: D



Watch Video Solution

113. Find the odd word from the given responses.

A. (a) Lemon

B. (b) Orange

C. (c) Apple

D. (d) Grapefruit

Answer: C



Watch Video Solution

114. Find the odd word pair from the given responses.

A. Paper - White

B. Sky - Blue

C. Cassette - Song

D. Leaf - Green

Answer: C



Watch Video Solution

115. Find the odd word pair from the given responses.

A. Boxing

B. Wrestling

C. Karate

D. Long jump

Answer: D



Watch Video Solution

116. Find the odd word pair from the given responses.

A. Red

B. Blue

C. Veranda

D. Black

Answer: D



Watch Video Solution

117. Find the odd word pair from the given responses.

A. Bus

B. Car

C. Train

D. Truck

Answer: C



Watch Video Solution

118. Find the odd word pair from the given responses.

A. Carbon

B. Graphite

C. Diamond

D. Gold

Answer: D



Watch Video Solution

119. Find the odd word pair from the given responses.

A. HONOUR

B. HOUR

C. PSYCHIC

D. PUBLIC

Answer: D



Watch Video Solution

120. Find the odd word pair from the given responses.

A. Tennis

B. Cricket

C. Badminton

D. Squash

Answer: D



Watch Video Solution

121. Find the odd word pair from the given responses.

A. Deluge

B. Calamity

C. Catastrophe

D. War

Answer: D



Watch Video Solution

122. Find the odd word pair from the given responses.

A. (a) Bird - Feather

B. (b) Building - Brick

C. (c) Car - Petrol

D. (d) Flowers - Petals

Answer: C



Watch Video Solution

123. Find the odd word pair from the given responses.

A. Square

B. Rhombus

C. Equilateral triangle

D. Pentagon

Answer: D



Watch Video Solution

124. Find the odd word pair from the given responses.

A. Brother Sister

B. Mother-Father

C. Uncle-Aunt

D. Husband Wife

Answer: A



Watch Video Solution

125. Find the odd one out from the given responses.

A. (a) Snooker

B. (b) Table Tennis

C. (c) Badminton

D. (d) Billiards

Answer: C



Watch Video Solution

126. Find the odd word pair from the given responses.

A. Maple

B. Beet

C. Cane

D. Apple

Answer: B



Watch Video Solution

127. Find the odd word pair from the given responses.

A. Connect

B. Bond

C. Hook

D. Link

Answer: C



Watch Video Solution

128. Find the odd word pair from the given responses.

A. Silver

B. Gold

C. Steel

D. Copper

Answer: C



Watch Video Solution

129. Find the odd word pair from the given responses.

A. Sea

B. Lake

C. Ocean

D. River

Answer: B



Watch Video Solution

130. Find the odd word pair from the given responses.

A. School

B. Principal

C. Teacher

D. Student

Answer: A



Watch Video Solution

131. Find the odd word pair from the given responses.

A. (a) Mother-Daughter

B. (b) Uncle-Nephew

C. (c) Father-Son

D. (d) Brother-Sister

Answer: D



Watch Video Solution

132. Find the odd one out from the given responses.

A. (a) Nest

B. (b) Burrow

C. (c) Roof

D. (d) Den

Answer: C



Watch Video Solution

133. Find the odd word pair from the given responses.

A. Neptune

B. Uranus

C. Plato

D. Mercury

Answer: C



Watch Video Solution

134. Find the odd word pair from the given responses.

A. Post

B. Telegram

C. Telephone

D. Electricity

Answer: D



Watch Video Solution

135. Find the odd word pair from the given responses.

A. Uncle-Niece

B. Wife-Husband

C. Brother-Sister

D. Nephew-Uncle

Answer: D



Watch Video Solution

136. Find the odd word pair from the given responses.

A. Pilot

B. Passenger

C. Driver

D. Sailor

Answer: B



Watch Video Solution

137. Find the odd word pair from the given responses.

A. Enlarge

B. Expand

C. Increase

D. Unite

Answer: D



Watch Video Solution

138. Find the odd word pair from the given responses.

A. Saturn

B. Venus

C. Sun

D. Jupiter

Answer: C



Watch Video Solution

139. Find the odd word pair from the given responses.

A. Smoulder

B. Decay

C. Putrefy

D. Decompose

Answer: A



Watch Video Solution

140. Find the odd word pair from the given responses.

A. hair

B. feather

C. wool

D. grass

Answer: D



Watch Video Solution

141. Find the odd word pair from the given responses.

A. Bulb - Filament

B. Pencil - Lead

C. Leaf - Flower

D. Fruit - Seed

Answer: C



Watch Video Solution

142. Find the odd word pair from the given responses.

A. Artist - painting

B. Baker - cake

C. Cobbler - shoes

D. Watch-time

Answer: D



Watch Video Solution

143. Find the odd word pair from the given responses.

A. Mile

B. Centimetre

C. Litre

D. Yard

Answer: C



Watch Video Solution

144. Find the odd word pair from the given responses.

A. High-up

B. Past-Present

C. Often-Seldom

D. Fresh-Stale

Answer: A



Watch Video Solution

145. Find the odd one out from the given responses.

A. (a) Bangkok

B. (b) Yangon (Rangoon)

C. (c) Jeddah

D. (d) Kabul

Answer: C



Watch Video Solution

146. Find the odd word pair from the given responses.

A. Happiness

B. Honesty

C. Deceive

D. Truth

Answer: C



Watch Video Solution

147. Find the odd word pair from the given responses.

A. Son

B. Nicce

C. Grandson

D. Grand-daughter

Answer: B



Watch Video Solution

148. Find the odd word pair from the given responses.

A. January

B. February

C. July

D. December

Answer: B



Watch Video Solution

149. Find the odd word pair from the given responses.

A. Intelligent

B. Precis

C. Stupid

D. Comprehensive

Answer: C



Watch Video Solution

150. Find the odd word pair from the given responses.

A. Wool

B. Feather

C. Hair

D. Grass

Answer: D



Watch Video Solution

151. Find the odd word pair from the given responses.

A. Foreword

B. Text

C. Index

D. Preface

Answer: C



Watch Video Solution

152. Find the odd word pair from the given responses.

A. Giraffe

B. Horse

C. Camel

D. Bullock

Answer: A



Watch Video Solution

153. Find the odd word pair from the given responses.

A. Sports - Ground

B. Cinema -Screen

C. Drama -Stage

D. Rubber - Erase

Answer: D



Watch Video Solution

154. Find the odd one out from the given responses.

A. (a) September

B. (b) April

C. (c) November

D. (d) January

Answer: D



Watch Video Solution

155. Find the odd one out from the given responses.

A. (a) Carbon

B. (b) Graphite

C. (c) Diamond

D. (d) Gold

Answer: D



Watch Video Solution

156. Find the odd word pair from the given responses.

A. Iron

B. Mercury

C. Silver

D. Gold

Answer: B



Watch Video Solution

157. Find the odd word pair from the given responses.

A. January

B. June

C. July

D. August

Answer: B



Watch Video Solution

158. Find the odd word pair from the given responses.

A. Sqaure

B. Sphere

C. Rectangle

D. Circle

Answer: B



Watch Video Solution

159. Find the odd word pair from the given responses.

A. Copper

B. Bronze

C. Gold

D. Silver

Answer: B



Watch Video Solution

160. Find the odd one out from the given responses.

A. (a) Mile

B. (b) Centimetre

C. (c) Litre

D. (d) Yard

Answer: C



Watch Video Solution

161. Find the odd one out from the given responses.

A. (a) March

B. (b) April

C. (c) August

D. (d) December

Answer: B



Watch Video Solution

162. Find the odd word pair from the given responses.

A. Bus

B. Scooter

C. Cycle

D. Boat

Answer: D



Watch Video Solution

163. Find the odd word pair from the given responses.

A. Iron

B. Plastic

C. Brass

D. Copper

Answer: B



Watch Video Solution

164. Find the odd word pair from the given responses.

A. Iron

B. Aluminium

C. Wood

D. Copper

Answer: C



Watch Video Solution

165. Find the odd word pair from the given responses.

A. (a) Game - Coach

B. (b) Drama - Director

C. (c) Counselling - Counsellor

D. (d) Student - Teacher

Answer: D



Watch Video Solution

166. Find the odd one out from the given responses.

A. (a) Goat

B. (b) Dog

C. (c) Sheep

D. (d) Cow

Answer: B



Watch Video Solution

167. Find the odd word pair from the given responses.

A. Diabetes

B. Swine flu

C. Chicken pox

D. Malaria

Answer: A



Watch Video Solution

168. Find the odd word pair from the given responses.

A. Eye

B. Hand

C. Nose

D. Ear

Answer: C



Watch Video Solution

169. Find the odd word pair from the given responses.

A. Grapes

B. Pomegranate

C. Cardamom

D. Mango

Answer: C



Watch Video Solution

170. Find the odd word pair from the given responses.

A. water

B. pool

C. lake

D. pond

Answer: A



Watch Video Solution

171. Find the odd word pair from the given responses.

A. River

B. Ocean

C. Lake

D. Rain

Answer: D



Watch Video Solution

172. Find the odd word pair from the given responses.

A. King

B. Queen

C. Royal

D. Prince

Answer: C



Watch Video Solution

173. Find the odd word pair from the given responses.

A. Mango

B. Apple

C. Orange

D. Guava

Answer: A



Watch Video Solution

174. Find the odd word pair from the given responses.

A. Iron

B. Steel

C. Gold

D. Tin

Answer: B



Watch Video Solution

175. Find the odd word pair from the given responses.

A. Book

B. Journal

C. Article

D. Newspaper

Answer: C



Watch Video Solution

176. Find the odd word pair from the given responses.

A. Araldite

B. Gel

C. Plaster

D. Wax

Answer: D



Watch Video Solution

177. Find the odd word pair from the given responses.

A. Sitar

B. Violin

C. Flute

D. Veena

Answer: C



Watch Video Solution

178. Find the odd word pair from the given responses.

A. River

B. Mountain

C. Dam

D. Forest

Answer: C



Watch Video Solution

179. Find the odd word pair from the given responses.

A. Tangent

B. Arc

C. Radius

D. Diagonal

Answer: D



Watch Video Solution

180. Find the odd word pair from the given responses.

A. Pen

B. Marker

C. Paper

D. Pencil

Answer: C



Watch Video Solution

181. Find the odd word pair from the given responses.

A. Graph

B. Chart

C. Model

D. Drawing

Answer: C



Watch Video Solution

182. Find the odd word pair from the given responses.

A. Peak

B. Mountain

C. Hillock

D. Valley

Answer: D



Watch Video Solution

183. Find the odd word pair from the given responses.

A. Wood

B. Cork

C. Stone

D. Paper

Answer: C



Watch Video Solution

184. Find the odd word pair from the given responses.

A. Rain

B. Cloud

C. Mist

D. Fog

Answer: A



Watch Video Solution

185. Find the odd word pair from the given responses.

A. Lawyer

B. Carpenter

C. Doctor

D. Engineer

Answer: B



Watch Video Solution

186. Find the odd word pair from the given responses.

A. Cholera

B. Cancer

C. AIDS

D. Health

Answer: D



Watch Video Solution

187. Find the odd word pair from the given responses.

A. Cotton

B. Nylon

C. Silk

D. Cotton

Answer: C



Watch Video Solution

188. Find the odd word pair from the given responses.

A. Leaf

B. Stem

C. Branches

D. Gardensabse

Answer: D



Watch Video Solution

189. Find the odd word pair from the given responses.

A. Orde

B. Speed Post

C. Letter

D. SMS

Answer: D



Watch Video Solution

190. Find the odd word pair from the given responses.

A. Eyes

B. Nose

C. Lips

D. Throat

Answer: C



Watch Video Solution

191. Find the odd word pair from the given responses.

A. Wheat

B. Mustard

C. Barley

D. Corn

Answer: B



Watch Video Solution

192. Find the odd word pair from the given responses.

A. Bus

B. Scooter

C. Car

D. Cycle

Answer: D



Watch Video Solution

193. Find the odd word pair from the given responses.

A. Ink - Pen

B. Dust-Vacuum cleaner

C. Petrol - Car

D. Electricity - Television

Answer: B



Watch Video Solution

194. Find the odd word pair from the given responses.

A. Short - Long

B. Man - Woman

C. Light - Heavy

D. Crime - Blame

Answer: D



Watch Video Solution

195. Find the odd word pair from the given responses.

A. Nose

B. Ear

C. Tongue

D. Teeth

Answer: D



Watch Video Solution

196. Find the odd word pair from the given responses.

A. Carrom

B. Golf

C. Cricket

D. Hockey

Answer: A



Watch Video Solution

197. Find the odd word pair from the given responses.

A. Cupboard

B. Table

C. Chair

D. Bench

Answer: A



Watch Video Solution

198. Find the odd word pair from the given responses.

A. Ward

B. Mentor

C. Pupil

D. Student

Answer: B



Watch Video Solution

199. Find the odd word pair from the given responses.

A. Stem

B. Leaf

C. Flower

D. Root

Answer: D



Watch Video Solution

200. Find the odd word pair from the given responses.

A. Guitar

B. Violin

C. Flute

D. Veena

Answer: C



Watch Video Solution

201. Find the odd word pair from the given responses.

A. Tomato

B. Potato

C. Onion

D. Carrot

Answer: A



Watch Video Solution

202. Find the odd word pair from the given responses.

A. Jasmine

B. Sunflower

C. Lotus

D. Rose flower

Answer: C



Watch Video Solution

203. Find the odd word pair from the given responses.

A. Mumbai

B. Chennai

C. Calcutta

D. Bangalore

Answer: D



Watch Video Solution

204. Find the odd word pair from the given responses.

A. Calf

B. Duckling

C. Puppy

D. Kitten

Answer: B



Watch Video Solution

205. Find the odd word pair from the given responses.

A. Chennai

B. Mumbai

C. Delhi

D. Vishakhapatnam

Answer: C



Watch Video Solution

206. Find the odd word pair from the given responses.

A. Lamb

B. Goat

C. Ewe

D. Ram

Answer: B



Watch Video Solution

207. Find the odd word pair from the given responses.

A. Botany

B. English

C. Physics

D. Chemistry

Answer: B



Watch Video Solution

208. Find the odd word pair from the given responses.

A. Krishna

B. Cauvery

C. Narmada

D. Mahanadi

Answer: C



Watch Video Solution

209. Find the odd word pair from the given responses.

A. May

B. June

C. July

D. August

Answer: B



Watch Video Solution

210. Find the odd word pair from the given responses.

A. Ant

B. Spider

C. Bee

D. Moth

Answer: A



Watch Video Solution

211. Find the odd word pair from the given responses.

A. SpiceJet

B. Kingfisher

C. Air India

D. Indigo

Answer: C



Watch Video Solution

212. Find the odd word pair from the given responses.

A. Hinduism

B. Communism

C. Buddhism

D. Jainism

Answer: B



Watch Video Solution

213. Find the odd word pair from the given responses.

A. Elephant

B. Tiger

C. Lion

D. Bear

Answer: A



Watch Video Solution

214. Find the odd word pair from the given responses.

A. Lakshadweep

B. Tamil Nadu

C. Andhra Pradesh

D. Kerala

Answer: A



Watch Video Solution

215. Find the odd word pair from the given responses.

A. College

B. Kindergarten

C. School

D. Education

Answer: D



Watch Video Solution

216. Find the odd word pair from the given responses.

A. Watch

B. Clock

C. Bangle

D. Bracelet

Answer: B



Watch Video Solution

217. Find the odd word pair from the given responses.

A. Brotherhood

B. Babyhood

C. Adulthood

D. Childhood

Answer: A



Watch Video Solution

218. Find the odd word pair from the given responses.

A. Pen - Ink

B. Pot - Water

C. Bottle - Tonic

D. Cylinder - Air

Answer: A



Watch Video Solution

219. Find the odd word pair from the given responses.

A. Cement

B. Glue

C. Gum

D. Lock FCI

Answer: D



Watch Video Solution

220. Find the odd word pair from the given responses.

A. Biography

B. Photography

C. Lithography

D. Xerography

Answer: A



Watch Video Solution

221. Find the odd word pair from the given responses.

A. Petrol - Car

B. Coal - Engine

C. Smoke - Fire

D. Oil - Lamp

Answer: C



Watch Video Solution

222. Find the odd word pair from the given responses.

A. SPOKE

B. SMOKE

C. KOPES

D. POKES

Answer: B



Watch Video Solution

223. Find the odd word pair from the given responses.

A. Steel

B. Brass

C. Mercury

D. Copper

Answer: C



Watch Video Solution

224. Find the odd word pair from the given responses.

A. Debit - Credit

B. ProfitGain

C. Income - Expenditure

D. Assets-Liabilities

Answer: B



Watch Video Solution

225. Find the odd word pair from the given responses.

A. Trousers

B. Coats

C. Shirts

D. Jackets

Answer: A



Watch Video Solution

226. Find the odd word pair from the given responses.

A. steering wheel

B. engine

C. car

D. tyre

Answer: C



Watch Video Solution

227. Find the odd word pair from the given responses.

A. uranus

B. pluto

C. jupiter

D. sun

Answer: D



Watch Video Solution

228. Find the odd word pair from the given responses.

A. Chop

B. Slit

C. Chirp

D. Slice

Answer: C



Watch Video Solution

229. Find the odd word pair from the given responses.

A. Giddy

B. Defeat

C. Mother

D. Father

Answer: A



Watch Video Solution

230. Find the odd word pair from the given responses.

A. Aluminium

B. Iron

C. Copper

D. Brass

Answer: D



Watch Video Solution

231. Find the odd word pair from the given responses.

A. Nepal

B. Myanmar

C. Bangladesh

D. Sri Lanka

Answer: D



Watch Video Solution

232. Find the odd word pair from the given responses.

A. Flatter

B. Compliment

C. Praise

D. Appraise

Answer: D



Watch Video Solution

233. Find the odd word pair from the given responses.

A. Sow

B. Peacock

C. Peahen

D. Mare

Answer: B



Watch Video Solution

234. Find the odd word pair from the given responses.

A. Japanese

B. Swiss

C. French

D. German

Answer: A



Watch Video Solution

235. Find the odd word pair from the given responses.

A. Sun

B. Moon

C. Universe

D. Star

Answer: C



Watch Video Solution

236. Find the odd word pair from the given responses.

A. Animal

B. Othello

C. Noun

D. Madam

Answer: C



Watch Video Solution

237. Find the odd word pair from the given responses.

A. Millet

B. Barley

C. Wheat

D. Green gram

Answer: A



Watch Video Solution

238. Find the odd word pair from the given responses.

A. Kitten

B. Cub

C. Pony

D. Doe

Answer: D



Watch Video Solution

239. Find the odd word pair from the given responses.

A. Silver

B. Platinum

C. Zinc

D. Bronze

Answer: D



Watch Video Solution

240. Find the odd word pair from the given responses.

A. Yellow Orange

B. Red Yellow

C. Red Orange

D. Yellow Green

Answer: A



Watch Video Solution

241. Find the odd word pair from the given responses.

A. Pound (Sterling)

B. Deutsche Mark

C. Yen

D. Franc

Answer: C



Watch Video Solution

242. Find the odd word pair from the given responses.

A. firm

B. grave

C. agreeable

D. fastidious

Answer: C



Watch Video Solution

243. Find the odd word pair from the given responses.

A. Marine

B. Ocean

C. Navigation

D. Sea

Answer: C



Watch Video Solution

244. Find the odd word pair from the given responses.

A. Shimla

B. Darjeeling

C. Ooty

D. Agra

Answer: D



Watch Video Solution

245. Find the odd word pair from the given responses.

A. Foal

B. Hen

C. Lamb

D. Leveret

Answer: B



Watch Video Solution

246. Find the odd word pair from the given responses.

A. Sweater

B. Muffler

C. Socks

D. Shawl

Answer: C



Watch Video Solution

247. Find the odd word pair from the given responses.

A. Vedanthangal

B. Bandipur

C. Mudumalai

D. Thekkady

Answer: D



Watch Video Solution

248. Find the odd word pair from the given responses.

A. Internet Explorer

B. Chrome

C. Google

D. Firefox

Answer: C



Watch Video Solution

249. Find the odd word pair from the given responses.

A. Opponent

B. Adversary

C. Ally

D. Antagonist

Answer: C



Watch Video Solution

250. Find the odd word pair from the given responses.

A. Pentagon

B. Circle

C. Rhombus

D. Diagonal

Answer: D



Watch Video Solution

251. Find the odd word pair from the given responses.

A. Soldier - Barrack

B. Principal - School

C. Artist - Troupe

D. Singer - Chorous

Answer: B



Watch Video Solution

252. Find the odd word pair from the given responses.

A. Detach

B. Affix

C. Append

D. Fasten

Answer: A



Watch Video Solution

253. Find the odd word pair from the given responses.

A. Influenza

B. Scurvy

C. Rickets

D. Night-blindness

Answer: A



Watch Video Solution

254. Find the odd word pair from the given responses.

A. Raisin

B. Rain

C. Shower

D. Sleet

Answer: A



Watch Video Solution

255. Find the odd word pair from the given responses.

A. Heap

B. Head

C. Heed

D. Led

Answer: D



Watch Video Solution

256. Find the odd word pair from the given responses.

A. Teaching

B. Counselling

C. Instruction

D. Guidance

Answer: A



Watch Video Solution

257. Find the odd word pair from the given responses.

A. HEAT

B. MEAT

C. MEET

D. BEAT

Answer: C



Watch Video Solution

258. Find the odd word pair from the given responses.

A. Sitar

B. Violin

C. Tanpura

D. Veena

Answer: B



Watch Video Solution

259. Find the odd word pair from the given responses.

A. Lieutenant General

B. Major

C. Colonel

D. Commodore

Answer: D



Watch Video Solution

260. Find the odd word pair from the given responses.

A. Maharashtra : Mumbai

B. Karnataka : Bengaluru

C. Rajasthan : Jaisalmer

D. Meghalaya : Shillong

Answer: C



Watch Video Solution

261. Find the odd word pair from the given responses.

A. Right to Equality

B. Right to Freedom of Religion

C. Right to Study

D. Right against Exploitation

Answer: C



Watch Video Solution

262. Find the odd word pair from the given responses.

A. December

B. January

C. February

D. March

Answer: C



Watch Video Solution

263. Find the odd word pair from the given responses.

A. Anger

B. Destroy

C. Irritation

D. Rage

Answer: B



Watch Video Solution

264. Find the odd word pair from the given responses.

A. Quran

B. Gita

C. Panchsheel

D. Bible

Answer: C



Watch Video Solution

265. Find the odd word pair from the given responses.

A. Forgetting

B. Convergent Production

C. Divergent Production

D. Cognition

Answer: A



Watch Video Solution

266. Find the odd word pair from the given responses.

A. Distress

B. Sorrow

C. Fantasy

D. Disgust

Answer: C



Watch Video Solution

267. Find the odd word pair from the given responses.

A. Distribution

B. Dispersion

C. Diversion

D. Dilution

Answer: D



Watch Video Solution

268. Find the odd word pair from the given responses.

A. Bachelor

B. Widow

C. Spinster

D. Wife

Answer: A



Watch Video Solution

269. Find the odd word pair from the given responses.

A. Tennis

B. Cricket

C. Volleyball

D. Football

Answer: A



Watch Video Solution

270. Find the odd word pair from the given responses.

A. artificial

B. insincere

C. affected

D. naive

Answer: D



Watch Video Solution

271. Find the odd word pair from the given responses.

Triangle

Pyramid

Rhombus

Parallelogram



Watch Video Solution

272. Find the odd word pair from the given responses.

A. Diamond

B. Gold

C. Silver

D. Platinum

Answer: A



Watch Video Solution

273. Find the odd word pair from the given responses.

Outspoken

Cringing

Servile

Fawning



Watch Video Solution

274. Find the odd word pair from the given responses.

A. Anthropology

B. Psychology

C. Taxology

D. Sociology

Answer: C



Watch Video Solution

275. Find the odd word pair from the given responses.

A. Time : Seconds

B. Pressure : Barometer

C. Length : Metre

D. Volume : Litre

Answer: B



Watch Video Solution

276. Find the odd word pair from the given responses.

A. APPLE

B. ANGLE

C. ADORE

D. AMPLE

Answer: C



Watch Video Solution

277. Find the odd word pair from the given responses.

A. Varanasi

B. Agra

C. Haridwar

D. Allahabad

Answer: B



Watch Video Solution

278. Find the odd word pair from the given responses.

A. Phycology : Algae

B. Ornithology: Birds

C. Mycology : Fungi

D. Biology: Botany

Answer: D



Watch Video Solution

279. Find the odd word pair from the given responses.

A. Square

B. Trapezium

C. Cylinder

D. Parallelogram

Answer: C



Watch Video Solution

280. Find the odd word pair from the given responses.

A. Yacht

B. Submarine

C. Boat

D. Ship

Answer: B



Watch Video Solution

281. Find the odd word pair from the given responses.

A. Autobiography

B. Malayalam

C. Intelligence

D. Dictionary

Answer: B



Watch Video Solution

282. Find the odd word pair from the given responses.

A. Screw driver

B. Spanner

C. Plier

D. Knife

Answer: D



Watch Video Solution

283. Find the odd one out from the given responses.

A. (a) Paris

B. (b) Athens

C. (c) London

D. (d) New York

Answer: D



Watch Video Solution

284. Find the odd one out from the given responses.

A. (a) Duck

B. (b) Avoid

C. (c) Dodge

D. (d) Flee

Answer: D



Watch Video Solution

285. Find the odd one out from the given responses.

A. (a) Emu

B. (b) Penguin

C. (c) Kiwi

D. (d) Eagle

Answer: D



Watch Video Solution

286. Find the odd word pair from the given responses.

A. Hill Myna

B. House Sparrow

C. Emerald Dove

D. Imperial Eagle

Answer: B



Watch Video Solution

287. Find the odd one out from the given responses.

A. (a) Appreciate

B. (b) Admonish

C. (c) Applaud

D. (d) Admire

Answer: B



Watch Video Solution

288. Find the odd word pair from the given responses.

A. Anther

B. Retina

C. Ovary

D. Petal

Answer: B



Watch Video Solution

289. Find the odd word pair from the given responses.

A. (a) January, May

B. (b) April, June

C. (c) July, August

D. (d) January, December

Answer: B



Watch Video Solution

290. Find the odd word pair from the given responses.

A. Aptitude

B. Altitude

C. Attitude

D. Behaviour

Answer: B



Watch Video Solution

291. Find the odd word pair from the given responses.

A. Square

B. Equilateral Triangle

C. Rhombus

D. Right Angle Triangle

Answer: D



Watch Video Solution

292. Find the odd one out from the given responses.

A. (a) Poland

B. (b) Korea

C. (c) Spain

D. (d) Greece

Answer: B



Watch Video Solution

293. Find the odd word pair from the given responses.

A. Polaris

B. Nike

C. Crux

D. Phoenix

Answer: C



Watch Video Solution

294. Find the odd one out from the given responses.

A. (a) Chameleon

B. (b) Crocodile

C. (b) Alligator

D. (d) Locust

Answer: D



Watch Video Solution

295. Find the odd one out from the given responses.

A. (a) Asia

B. (b) Canada

C. (c) Europe

D. (d) Africa

Answer: B



Watch Video Solution

296. Find the odd word pair from the given responses.

A. Violin

B. Sitar

C. Flute

D. Piano

Answer: C



Watch Video Solution

297. Find the odd word pair from the given responses.

A. Metre

B. Inch

C. Litre

D. Yard

Answer: C



Watch Video Solution

298. Find the odd word pair from the given responses.

A. (a) Ocean

B. (b) Waterfall

C. (c) Pond

D. (d) River

Answer: C



Watch Video Solution

299. Find the odd word pair from the given responses.

A. (a) Compress

B. (b) Condense

C. (c) Concise

D. (d) Convert

Answer: D



Watch Video Solution

300. Find the odd word pair from the given responses.

A. (a) Polar Bear

B. (b) Penguin

C. (c) Seat

D. (d) Tiger

Answer: D



Watch Video Solution

301. Find the odd word pair from the given responses.

A. Orange

B. Apple

C. Lemon

D. Grapes

Answer: B



Watch Video Solution

302. In each of the following questions, find the odd word from the given alternatives.

A. Obstetrician

B. Podiatrist

C. Pulmonologist

D. Prosthetist

Answer: D



Watch Video Solution

303. In each of the following questions, find the odd word from the given alternatives.

A. Century

B. Decadent

C. Year

D. Month

Answer: B



Watch Video Solution

304. In each of the following questions, find the odd word from the given alternatives.

A. (a) Liver

B. (b) Pituitary

C. (c) Adrenal

D. (d) Thyroid

Answer: A



Watch Video Solution

305. In each of the following questions, find the odd word from the given alternatives.

A. Fingers

B. Ears

C. Hands

D. Legs

Answer: A



Watch Video Solution

306. In each of the following questions, find the odd word from the given alternatives.

A. (a) July

B. (b) November

C. (c) December

D. (d) October

Answer: B



Watch Video Solution

307. In each of the following questions, find the odd word from the given alternatives.

A. (a) Violet

B. (b) Pink

C. (c) Blue

D. (d) Orange

Answer: B



Watch Video Solution

308. In each of the following questions, find the odd word from the given alternatives.

A. (a) Red

B. (b) Blue

C. (c) Black

D. (d) Green

Answer: C



Watch Video Solution

309. In each of the following questions, find the odd word from the given alternatives.

A. (a) Jostle

B. (b) Nudge

C. (c) Push

D. (d) Trash

Answer: D



Watch Video Solution

310. In each of the following questions, find the odd word from the given alternatives.

A. Content

B. Bibliography

C. Press

D. Preface

Answer: C



Watch Video Solution

311. In each of the following questions, find the odd word from the given alternatives.

A. (a) Tetanus

B. (b) Pneumonia

C. (c) Tuberculosis

D. (d) Hepatitis

Answer: D



Watch Video Solution

312. In each of the following questions, find the odd word from the given alternatives.

A. (a) Tulip

B. (b) Lotus

C. (c) Marigold

D. (d) Rose

Answer: B



Watch Video Solution

313. In each of the following questions, find the odd word from the given alternatives.

A. Bronze

B. Tin

C. Brass

D. Steel

Answer: B



Watch Video Solution

314. Find the odd word from the given alternatives.

A. Camel

B. Cat

C. Horse

D. Bullock

Answer: B



Watch Video Solution

315. In each of the following questions, find the odd word from the given alternatives.

A. (a) Bangle

B. (b) Necklace

C. (c) Armour

D. (d) Ring

Answer: C



Watch Video Solution

316. In each of the following questions, find the odd word from the given alternatives.

A. CATARACT

B. GLAUCOMAT

C. ECZEMA

D. HYPERMETROPIA

Answer: C



Watch Video Solution

317. In each of the following questions, find the odd word from the given alternatives.

A. Night

B. Morning

C. Noon

D. Evening

Answer: C



Watch Video Solution

318. In each of the following questions, find the odd word from the given alternatives.

A. (a) Fraternity

B. (b) Liberty

C. (c) Society

D. (d) Equality

Answer: C



Watch Video Solution

319. In each of the following questions, find the odd word from the given alternatives.

A. Legislator

B. Lawyer

C. Mayor

D. Governor

Answer: B



Watch Video Solution

320. In each of the following questions, find the odd word from the given alternatives.

A. (a) Parallel

B. (b) Acute

C. (c) Obtuse

D. (d) Right

Answer: A



Watch Video Solution

321. In each of the following questions, find the odd word from the given alternatives.

A. Murder

B. Kil

C. Kidnap

D. Assassinate

Answer: C



Watch Video Solution

322. In each of the following questions, find the odd word from the given alternatives.

A. (a) Bern

B. (b) Geneva

C. (c) Zurich

D. (d) Bristol

Answer: B



Watch Video Solution

323. In each of the following questions, find the odd word from the given alternatives.

A. Agitate

B. Affirm

C. Attack

D. Affect

Answer: B



Watch Video Solution

324. In each of the following questions, find the odd word from the given alternatives.

A. Perimeter

B. Area

C. Density

D. Distance

Answer: C



Watch Video Solution

325. In each of the following questions, find the odd word from the given alternatives.

A. SMS

B. Speed post

C. Letter

D. Money order

Answer: A



Watch Video Solution

326. In each of the following questions, find the odd word from the given alternatives.

A. (a) Triangle

B. (b) Cube

C. (c) Square

D. (d) Trapezium

Answer: B



Watch Video Solution

327. In each of the following questions, find the odd word from the given alternatives.

A. (a) CINTHOL

B. (b) RIN

C. (c) HAMAM

D. (d) PEARS

Answer: B



Watch Video Solution

328. In each of the following questions, find the odd word from the given alternatives.

A. (a) Pen-Ink

B. (b) Brush-Paint

C. (c) Crayon- Chart

D. (d) Pencil-Lead

Answer: C



Watch Video Solution

329. In each of the following questions, find the odd word from the given alternatives.

Find out the odd word.

A. Sparrow

B. Kingfisher

C. Crane

D. Hummingbird

Answer: A



Watch Video Solution

330. In each of the following questions, find the odd word from the given alternatives.

A. Thick

B. Fathom

C. Plump

D. Solid

Answer: B



Watch Video Solution

331. In each of the following questions, find the odd word from the given alternatives.

A. Caprice

B. Quirk

C. Whim

D. Foible

Answer: B



Watch Video Solution

332. In each of the following questions, find the odd word from the given alternatives.

A. (a) Engine

B. (b) Horn

C. (c) Fuel

D. (d) Gear

Answer: C



Watch Video Solution

333. In each of the following questions, find the odd word from the given alternatives.

A. Rocket

B. Helicopter

C. Aeroplane

D. Sub-marine

Answer: D



Watch Video Solution

334. In each of the following questions, find the odd word from the given alternatives.

A. (a) RIM

B. (b) NOKIA

C. (c) MTS

D. (d) BSNL

Answer: B



Watch Video Solution

335. In each of the following questions, find the odd word from the given alternatives.

A. Rice : Cereals

B. Tea : Beverages

C. Tea : Beverages

D. Legumes : Nodules

Answer: C



Watch Video Solution

336. In each of the following questions, find the odd word from the given alternatives.

A. Fast

B. Knock

C. Wrong

D. Psychology

Answer: D



Watch Video Solution

337. In each of the following questions, find the odd word from the given alternatives.

A. (a) Triangle

B. (b) Cone

C. (c) Rectangle

D. (d) Circle

Answer: B



Watch Video Solution

338. In each of the following questions, find the odd word from the given alternatives.

A. Gujarat

B. Maharashtra

C. Karnataka

D. Arunachal Pradesh

Answer: D



Watch Video Solution

339. In each of the following questions, find the odd word from the given alternatives.

A. Water : Tap

B. Oxygen : Life

C. Power : Machine

D. Oil: Lamp

Answer: A



Watch Video Solution

340. In each of the following questions, find the odd word from the given alternatives.

A. Chlorophyll

B. Glucose

C. Nitrogen

D. Photosynthesis

Answer: D



Watch Video Solution

341. In each of the following questions, find the odd word from the given alternatives.

A. (a) MOUTH

B. (b) NOSE

C. (c) HAND

D. (d) EYES

Answer: C



Watch Video Solution

342. In each of the following questions, find the odd word from the given alternatives.

A. PORTRAIT

B. DRAW

C. PAINT

D. SKETCH

Answer: C



Watch Video Solution

343. In each of the following questions, find the odd word from the given alternatives.

A. (a) SHAWL

B. (b) SWEATER

C. (c) UMBRELLA

D. (d) GLOVES

Answer: C



Watch Video Solution

344. In each of the following questions, find the odd word from the given alternatives.

A. (a) Swing

B. (b) Googly

C. (c) Yorker

D. (d) Bouncer

Answer: B



Watch Video Solution

345. In each of the following questions, find the odd word from the given alternatives.

A. M.L.A

B. President

C. Prime Minister

D. Minister

Answer: B



Watch Video Solution

346. In each of the following questions, find the odd word from the given alternatives.

A. Humiliate

B. Degrade

C. Elope

D. Abase

Answer: C



Watch Video Solution

347. In each of the following questions, find the odd word from the given alternatives.

A. Mansion

B. Lodge

C. Tent

D. Inn

Answer: C



Watch Video Solution

348. In each of the following questions, find the odd word from the given alternatives.

A. Sphere

B. Circle

C. Square

D. Triangle

Answer: A



Watch Video Solution

349. In each of the following questions, find the odd word from the given alternatives.

A. Wing

B. Fin

C. Beak

D. Rudder

Answer: B



Watch Video Solution

350. In each of the following questions, find the odd word from the given alternatives.

A. Tardy

B. Slow

C. Late

D. Tired

Answer: C



Watch Video Solution

351. In each of the following questions, find the odd word from the given alternatives.

A. Confusion

B. Commotion

C. Annihilation

D. Agitation

Answer: C



Watch Video Solution

352. In each of the following questions, find the odd word from the given alternatives.

A. Earth: Moon

B. Sun: Star

C. Painter : Artist

D. Pen: Stationery

Answer: A



Watch Video Solution

353. In each of the following questions, find the odd word from the given alternatives.

A. LIENS

B. LINE

C. LEAN

D. NILE

Answer: C



Watch Video Solution

354. Find the odd word from the given alternatives.

A. (a) Rupee

B. (b) Pound

C. (c) Yen

D. (d) Currency

Answer: D



Watch Video Solution

355. Find the odd word from the given alternatives.

A. Affluent

B. Rich

C. Prestigious

D. Well-to-do

Answer: C



Watch Video Solution

356. Select the odd word from the given alternatives.

A. Abstract

B. Colonialism

C. Surrealism

D. Futurism

Answer: B



Watch Video Solution

357. Select the odd word from the given alternatives.

A. (a) Bajra

B. (b) Mustard

C. (c) Rice

D. (d) Wheat

Answer: B



Watch Video Solution

358. Select the odd words from the given alternatives.

A. Espresso

B. Tea

C. Cappuccino

D. Latte

Answer: B



Watch Video Solution

359. Select the odd word from the given alternatives :

A. (a) Consumer

B. (b) Purchaser

C. (c) Retailer

D. (d) Buyer

Answer: C



Watch Video Solution

360. Find the odd word from the given alternatives.

A. House

B. Stable

C. Hut

D. Cottage

Answer: B



Watch Video Solution

361. Find the odd word from the given alternatives.

A. Torch

B. Battery

C. Candle

D. Lamp

Answer: B



Watch Video Solution

362. In each of the following questions, find the odd word from the given alternatives.

A. Cringe

B. Crisp

C. Brittle

D. Crunch

Answer: A



Watch Video Solution

363. In each of the following questions, find the odd word from the given alternatives.

A. Cynicism

B. Fatalism

C. Optimism

D. Pessimism

Answer: C



Watch Video Solution

364. Select the odd word from the given alternatives.

A. Green

B. Black

C. Laterite

D. Alluvial

Answer: A



Watch Video Solution

365. Select the odd word from the given alternatives.

A. Cardiology

B. Psychology

C. Neurology

D. Nephrology

Answer: B



Watch Video Solution

366. Select the odd word from the given alternatives.

A. Genuine

B. Legitimate

C. Sham

D. Statutory

Answer: C



Watch Video Solution

367. Select the odd word from the given alternatives.

A. Baleful

B. Pestilent

C. Deathly

D. Wholesome

Answer: D



Watch Video Solution

368. Find the odd word pair from the given alternatives.

A. (a) Hard : Soft

B. (b) Hot : Cold

C. (c) Right : Wrong

D. (d) Come : Arrive

Answer: D



Watch Video Solution

369. Find the odd word from the given alternatives.

A. (a) Diving

B. (b) Swimming

C. (c) Driving

D. (d) Sailing

Answer: C



Watch Video Solution

370. Find the odd word from the given alternatives.

A. (a) Bigger

B. (b) Faster

C. (c) Greater

D. (d) Taller

Answer: B



Watch Video Solution

371. Find out the odd word from the given alternatives

A. (a) Arithmetic

B. (b) Mathematics

C. (c) Geometry

D. (d) Algebra

Answer: B



Watch Video Solution

372. Find the odd word from the given alternatives.

A. Shimla

B. Ooty

C. Darjeeling

D. Agra

Answer: D



Watch Video Solution

373. Find the odd word pair from the given alternatives.

A. High-Up

B. Past-Present

C. Often-Seldom

D. Fresh-Stale

Answer: A



Watch Video Solution

374. Find the odd word from the given alternatives.

A. Herb

B. Flower

C. Tree

D. Shrub

Answer: B



Watch Video Solution

375. Find the odd word from the given alternatives.

A. Time

B. Skill

C. Interest

D. Knowledge

Answer: A



Watch Video Solution

376. Find the odd word from the given alternatives :

A. Distinguish

B. Scatter

C. Differentiate

D. Classification

Answer: B



Watch Video Solution

377. Find the odd word from the given alternatives.

A. Tomcat

B. Baby

C. Fawn

D. Cub

Answer: B



Watch Video Solution

378. Find the odd word from the given alternatives :

A. (a) Fire

B. (b) Light

C. (c) Gas

D. (d) Water

Answer: D



Watch Video Solution

379. Find the odd word from the given alternatives :

A. (a) Potato

B. (b) Tomato

C. (c) Ginger

D. (d) Carrot

Answer: B



Watch Video Solution

380. Find the odd word from the given alternatives :

A. (a) Novel

B. (b) Paper

C. (c) Pencil

D. (d) Pen

Answer: A



Watch Video Solution

381. Find the odd word from the given alternatives :

A. (a) Temple

B. (b) Worship

C. (c) Mosque

D. (d) Church

Answer: B



Watch Video Solution

382. Find the odd word from the given alternatives :

A. Man: Garage

B. Pig : Sty

C. Horse : Stable

D. Cow : Shed

Answer: A



Watch Video Solution

383. Find the odd word from the given alternatives :

A. (a) Cow

B. (b) Buffalo

C. (c) Horse

D. (d) Goat

Answer: C



Watch Video Solution

384. Find the odd word from the given alternatives :

A. Moon

B. Mars

C. Venus

D. Jupiter

Answer: A



Watch Video Solution

385. Find the odd word from the given alternatives :

A. Thermometer

B. Barometer

C. Diameter

D. Hygrometer

Answer: C



Watch Video Solution

386. Find the odd word from the given alternatives :

A. MARCH

B. MAY

C. JUNE

D. DECEMBER

Answer: C



Watch Video Solution

387. Find the odd word from the given alternatives :

A. Peninsula

B. Island

C. Bay

D. Cape

Answer: C



Watch Video Solution

388. Find the odd word from the given alternatives :

A. Tomato

B. Potato

C. Carrot

D. Radish

Answer: A



Watch Video Solution

389. Find the odd word from the given alternatives :

A. (a) Bud

B. (b) Branch

C. (c) Leaf

D. (d) Plant

Answer: D



Watch Video Solution

390. Find the odd word from the given alternatives :

A. (a) Apartment

B. (b) Garage

C. (c) Quarter

D. (d) Flat

Answer: B



Watch Video Solution

391. Find the odd word from the given alternatives :

A. Violin

B. Piano

C. Flute

D. Harmonium

Answer: C



Watch Video Solution

392. Find the odd word from the given alternatives :

A. Teacher

B. Lawyer

C. Doctor

D. Manager

Answer: D



Watch Video Solution

393. Find the odd word from the given alternatives :

A. Geometry

B. Trigonometry

C. Algebra

D. Mathematics

Answer: D



Watch Video Solution

394. Find the odd word from the given alternatives :

A. (a) Lion

B. (b) Panther

C. (c) Tiger

D. (d) Wolf

Answer: D



Watch Video Solution

395. Find the odd word from the given alternatives :

A. Neurologist

B. Dentist

C. Architect

D. Paediatrician

Answer: C



Watch Video Solution

396. Find the odd word from the given alternatives :

A. (a) Wolf

B. (b) Cat

C. (c) Dog

D. (d) Fox

Answer: B



Watch Video Solution

397. Find the odd word from the given alternatives :

A. Tabla

B. Tanpura

C. Sarod

D. Sitar

Answer: A



Watch Video Solution

398. Find the odd word from the given alternatives :

A. Rival

B. Opponent

C. Foe

D. Ally

Answer: D



Watch Video Solution

399. Find the odd word from the given alternatives :

A. Kilogram

B. Quintal

C. Ton

D. Gallon

Answer: D



Watch Video Solution

400. Find the odd word from the given alternatives :

A. Throat

B. Eye

C. Ear

D. Skin

Answer: A



Watch Video Solution

401. Find the odd word from the given alternatives :

A. Teacher and Student

B. Chemistry and Science

C. History and Mathematics

D. Air and Oxygen

Answer: C



Watch Video Solution

402. Find the odd word from the given alternatives :

A. Red

B. Brown

C. Green

D. Yellow s

Answer: B



Watch Video Solution

403. Find the odd word from the given alternatives :

A. Barbarous

B. Uncivilized

C. Gentle

D. Wild

Answer: C



Watch Video Solution

404. Find the odd word from the given alternatives :

A. January

B. April

C. July

D. May

Answer: B



Watch Video Solution

405. Find the odd word from the given alternatives :

A. Metre

B. Kilometre

C. Decimetre

D. Ammeter

Answer: D



Watch Video Solution

406. Find the odd word from the given alternatives :

A. Square

B. Sphere

C. Rectangle

D. Circle

Answer: B



Watch Video Solution

407. Find the odd one out from the given alternatives :

A. (a) Grief

B. (b) Sorrow

C. (c) Smile

D. (d) Weep

Answer: C



Watch Video Solution

408. Find the odd word from the given alternatives :

A. Quadrilateral

B. Cube

C. Square

D. Triangle

Answer: B



Watch Video Solution

409. Find the odd word from the given alternatives :

A. Mustard gas

B. Gasoline

C. Diesel

D. Natural gas

Answer: A



Watch Video Solution

410. Find the odd word from the given alternatives :

A. Washington

B. New York

C. Las Vegas

D. Sydney

Answer: D



Watch Video Solution

411. Find the odd word from the given alternatives :

A. Rival

B. Opponent

C. Foe

D. Ally

Answer: D



Watch Video Solution

412. Find the odd word from the given alternatives :

A. Highlighter

B. Pen

C. Paper

D. Marker

Answer: C



Watch Video Solution

413. Find the odd word from the given alternatives :

A. NOSE

B. EARS

C. VESTIBULAR

D. EYES

Answer: C



Watch Video Solution

414. Find the odd word from the given alternatives :

A. Tetanus

B. Syphilis

C. Plague

D. Malaria

Answer: D



Watch Video Solution

415. Select the odd word from the given alternatives :

A. Keyboard

B. Mouse

C. Monitor

D. Joystick

Answer: C



Watch Video Solution

416. Find out the odd word from the given alternatives :

A. Washington

B. New York

C. Las Vegas

D. Sydney

Answer: D



Watch Video Solution

417. Select the odd word from the given alternatives :

A. Veena

B. Guitar

C. Violin

D. Flute

Answer: D



Watch Video Solution

418. Select the odd word from the given alternatives :

A. Elephant

B. Giraffe

C. Cow

D. Hen

Answer: D



Watch Video Solution

419. Select the odd word from the given alternatives :

A. Cap

B. Turban

C. Trouser

D. Hat

Answer: C



Watch Video Solution

420. Select the odd word from the given alternatives :

A. Xenon

B. Hydrogen

C. Argon

D. Helium s

Answer: B



Watch Video Solution

421. Select the odd word from the given alternatives :

A. Curd

B. Oil

C. Cheese

D. Butter

Answer: B



Watch Video Solution

422. Select the odd word from the given alternatives :

A. Baht

B. Dinar

C. Pound

D. Iraq s

Answer: D



Watch Video Solution

423. Choose the odd word from the given alternatives :

A. Violet

B. Blue

C. Indigo

D. White

Answer: D



Watch Video Solution

424. Find the odd words from the given alternatives.

A. (a) TONNES

B. (b) QUINTALS

C. (c) KILOGRAMS

D. (d) KILOMETRES

Answer: D



Watch Video Solution

425. In each of the following questions, select the odd word from the given alternatives :

A. (a) Hockey

B. (b) Chess

C. (c) Cricket

D. (d) Football

Answer: B



Watch Video Solution

426. In the following question, select the odd word from the given alternatives :

A. Newspaper

B. Journal

C. Novel

D. Magazine

Answer: C



Watch Video Solution

427. In the following question, select the odd word from the given alternatives:

A. Definite

B. Specific

C. Doubtful

D. Distinct

Answer: C



Watch Video Solution

428. In the following question, select the odd word from the given alternatives :

A. (a) Mercury

B. (b) Gold

C. (c) Silver

D. (d) Copper

Answer: A



Watch Video Solution

429. In the following question, select the odd word pair from the given alternatives :

A. Head : Brain

B. Hand: Wrist

C. Arm: Shoulder

D. Feet : Ankle

Answer: A



Watch Video Solution

430. In the following question, select the odd word from the given alternatives :

A. (a) Skin

B. (b) Lungs

C. (c) Heart

D. (d) Kidneys

Answer: A



Watch Video Solution

431. In the following question, select the odd word pair from the given alternatives :

A. Ink : Inkpot

B. Bottle : Wine

C. Tea : Cup

D. Water : Jug

Answer: B



Watch Video Solution

432. In the following question, select the odd word pair from the given alternatives :

A. (a) Snakes : Reptiles

B. (b) Buffalo : Mammal

C. (c) Kiwi: Bird

D. (d) Parrot : Mammal

Answer: D



Watch Video Solution

433. In the following question, select the odd word pair from the given alternatives :

A. Writer : Pen

B. Doctor : Chisel

C. Plumber: Wrench

D. Carpenter : Saw

Answer: B



Watch Video Solution

434. In the following question, select the odd word from the given alternatives :

A. (a) Mobile phone

B. (b) Laptop

C. (c) Television

D. (d) Cathode Rays

Answer: D



Watch Video Solution

435. In the following question, select the odd word pair from the given alternatives :

A. Gloves : Hand

B. Tie : Neck

C. Hanky : Hand

D. Socks : Feet

Answer: C



Watch Video Solution

436. In the following question, select the odd word from the given alternatives :

A. Cotton

B. Mustard

C. Peas

D. Sesame

Answer: A



Watch Video Solution

437. In the following question, select the odd word pair from the given alternatives :

A. (a) Venus : Planet

B. (b) Moon : Satellite

C. (c) Jupiter : Black Hole

D. (d) Sun: Star

Answer: C



Watch Video Solution

438. In the following question, select the odd word from the given alternatives :

A. Beneath

B. On top

C. Huge

D. Above

Answer: C



Watch Video Solution

439. In the following question, select the odd word from the given alternatives :

A. (a) Badminton

B. (b) Table Tennis

C. (c) Cricket

D. (d) Hockey

Answer: A



Watch Video Solution

440. In the following question, select the odd word pair from the given alternatives :

A. Quick : Fast

B. Lazy : Slow

C. Credible : Deceptive

D. Exhaust : Tired

Answer: C



Watch Video Solution

441. In the following question, select the odd word from the given alternatives :

A. Flower

B. Fruit

C. Leaves

D. Root

Answer: D



Watch Video Solution

442. In the following question, select the odd word from the given alternatives :

A. Ludo

B. Chess

C. Polo

D. Carrom

Answer: C



Watch Video Solution

443. In the following question, select the odd word from the given alternatives :

A. Baseball

B. Football

C. Hockey

D. Snooker

Answer: D



Watch Video Solution

444. In the following question, select the odd word pair from the given alternatives :

A. Sad: Hopeful

B. Happy : Ecstatic

C. High: Giant

D. Trail : Pathway

Answer: A



Watch Video Solution

445. In the following question, select the odd word from the given alternatives :

A. Music

B. Singer

C. Director

D. Actor

Answer: A



Watch Video Solution

446. Select the odd word from the given alternatives :

A. Knife

B. Fork

C. Plate

D. Spoon

Answer: C



Watch Video Solution

447. Select the odd word from the given alternatives :

A. (a) Cyan

B. (b) Crimson

C. (c) Indigo

D. (d) Sky blue

Answer: B



Watch Video Solution

448. Select the odd word from the given alternatives :

A. (a) Apple

B. (b) Mango

C. (c) Orange

D. (d) Almond

Answer: D



Watch Video Solution

449. Select the odd word from the given alternatives :

A. Stream

B. Rivulet

C. River

D. Valley

Answer: D



Watch Video Solution

450. Select the odd word from the given alternatives :

A. (a) Batsman

B. (b) Umpire

C. (c) Bowler

D. (d) Wicket-keeper

Answer: B



Watch Video Solution

451. In the following question, select the odd word pair from the given alternatives.

A. (a) Hanger : Airplane

B. (b) Yard : Train

C. (c) Depot : Bus

D. (d) Scooter : Garage

Answer: D



Watch Video Solution

452. In the following question, select the odd word pair from the given alternatives.

A. Room : House

B. Page : Book

C. Engine : Car

D. Food : Hunger

Answer: D



Watch Video Solution

453. In the following question, select the odd word from the given alternatives.

A. Petrol

B. Coal

C. Air

D. Natural Gas

Answer: C



Watch Video Solution

454. In the following question, select the odd word-pair from the given alternatives :

A. Monitor - Computer

B. Engine - Car

C. Scooter - Handle

D. Pitch-Stadium

Answer: C



Watch Video Solution

455. In the following question, select the odd word-pair from the given alternatives :

A. Wood - Tree

B. Water - River

C. Heat -Fire

D. Green - Colour

Answer: D



Watch Video Solution

456. In the following question, select the odd word-pair from the given alternatives :

A. Winter - Season

B. Cyan - Colour

C. Shirt - Cloth

D. Sand-Sea

Answer: D



Watch Video Solution

457. In the following question, select the odd word from the given alternatives :

A. Circle

B. Triangle

C. Cube

D. Rectangle

Answer: C



Watch Video Solution

458. In the following question, select the odd word from the given alternatives :

A. Water

B. Milks

C. Juice

D. Potato

Answer: D



Watch Video Solution

459. In the following question, select the odd word from the given alternatives :

A. Spanish

B. Italian

C. Chemistry

D. German

Answer: C



Watch Video Solution

460. In the following question, select the odd word-pair from the given alternatives :

A. Ground : Play

B. Solar system: Sun

C. Body : Hand

D. Tree : Stem

Answer: A



Watch Video Solution

461. In the following question, select the odd word from the given alternatives :

A. Sun

B. Earth

C. Jupiter

D. Mercury

Answer: A



Watch Video Solution

462. In the following question, select the odd word-pair from the given alternatives :

A. Teacher: Education

B. Judge : Justice

C. Carpenter : Saw

D. Doctor : Treatment

Answer: C



Watch Video Solution

463. In the following question, select the odd word from the given alternatives :

A. Walls

B. Doors

C. Floor

D. Foundation

Answer: D



Watch Video Solution

464. In the following question, select the odd word-pair from the given alternatives :

A. Clouds: Rain

B. Injury: Pain

C. Boiling: Evaporation

D. Freezing: Cold

Answer: D



Watch Video Solution

465. In the following question, select the odd word-pair from the given alternatives :

A. Car - Vehicle

B. Potato - Vegetable

C. Fruit - Grapes

D. Square - Shape

Answer: C



Watch Video Solution

466. In the following question, select the odd word-pair from the given alternatives :

A. Organs - Body

B. Rainbow - Colours

C. Book - Pages

D. Tyre - Rubber

Answer: A



Watch Video Solution

467. In the following question, select the odd word from the given alternatives :

A. Red

B. Green

C. Yellow

D. Dull

Answer: D



Watch Video Solution

468. In the following question, select the odd word from the given alternatives :

A. Book

B. Novel

C. Newspaper

D. Writer

Answer: D



Watch Video Solution

469. In the following question, select the odd word pair from the given alternatives :

A. Reptile - Lizard

B. Mammal - Deer

C. Mammal - Elephant

D. Rodent - Rabbit

Answer: C



Watch Video Solution

470. In the following question, select the odd word-pair from the given alternatives :

A. Square - Four

B. Pentagon - Five

C. Rectangle - Three

D. Triangle - Three

Answer: C



Watch Video Solution

TYPE-II

1. In each of the following question select the one which is different from other alternatives.

A. (a) $62 - 37$

B. (b) $72 - 40$

C. (c) $85 - 60$

D. (d) $103 - 78$

Answer: B



Watch Video Solution

2. In each of the ing question select the one which is different from other alternatives.

A. 84, 67

B. 112, 95

C. 79, 63

D. 167, 150

Answer: C



Watch Video Solution

3. In each of the following question select the one which is different from other alternatives.

A. (a) 8

B. (b) 42

C. (c) 39

D. (d) 35

Answer: A



Watch Video Solution

4. In each of the ing question select the one which is different from other alternatives.

A. 81 : 243

B. 0 : 7

C. 64 : 192

D. 25 : 75

Answer: B



Watch Video Solution

5. In each of the following question select the one which is different from other alternatives.

A. (a) 24

B. (b) 60

C. (c) 124

D. (d) 210

Answer: C



Watch Video Solution

6. In each of the ing question select the one which is different from other alternatives.

A. (52, 142)

B. (54, 126)

C. (56, 168)

D. (58, 184)

Answer: C



Watch Video Solution

7. In each of the ing question select the one which is different from other alternatives.

A. 34-43

B. 62-71

C. 55-62

D. 83-92

Answer: C



Watch Video Solution

8. In each of the following question select the one which is different from other alternatives.

A. (a) $94 - 7$

B. (b) $42 - 6$

C. (c) $35 - 5$

D. (d) $56 - 8$

Answer: A



Watch Video Solution

9. In each of the ing question select the one which is different from other alternatives.

A. $64 - 8$

B. $80 - 9$

C. $7 - 49$

D. $36 - 6$

Answer: B



Watch Video Solution

10. In each of the ing question select the one which is different from other alternatives.

A. 14, 9

B. 17, 8

C. 42, 3

D. 21, 6

Answer: C



Watch Video Solution

11. In each of the following question select the one which is different from other alternatives.

A. (a) 72

B. (b) 45

C. (c) 81

D. (d) 28

Answer: C



Watch Video Solution

12. In each of the ing question select the one which is different from other alternatives.

A. 26 — 62

B. 36 — 63

C. 46 — 64

D. 56 — 18

Answer: D



Watch Video Solution

13. In each of the ing question select the one which is different from other alternatives.

A. (a) 6958

B. (b) 7948

C. (c) 6895

D. (d) 9783

Answer: D



Watch Video Solution

14. In each of the ing question select the one which is different from other alternatives.

A. $117 - 39$

B. $164 - 41$

C. $198 - 66$

D. $213 - 71$

Answer: B



Watch Video Solution

15. In each of the following question select the one which is different from other alternatives.

A. 144

B. 169

C. 196

D. 210

Answer: D



Watch Video Solution

16. In each of the ing question select the one which is different from other alternatives.

A. 131

B. 256

C. 196

D. 225

Answer: A



Watch Video Solution

17. In each of the following question select the one which is different from other alternatives.

A. (a) $40 - 5$

B. (b) $60 - 12$

C. (c) $32 - 4$

D. (d) $88 - 11$

Answer: B



Watch Video Solution

18. In each of the following question select the one which is different from other alternatives.

A. (a) (23, 14)

B. (b) (36, 27)

C. (c) (29, 82)

D. (d) (18, 45)

Answer: C



Watch Video Solution

19. In each of the following options select the one which is different from other alternatives.

A. 5, 3, 2, 9

B. 2, 4, 3, 9

C. 1, 4, 3, 8

D. 3, 2, 3, 8

Answer: A



Watch Video Solution

20. In each of the following question select the one which is different from other alternatives.

A. (a) 462

B. (b) 369

C. (c) 862

D. (d) 761

Answer: D



Watch Video Solution

21. In each of the ing question select the one which is different from other alternatives.

A. 117, 13

B. 162, 18

C. 171, 19

D. 304, 16

Answer: D



Watch Video Solution

22. In each of the following question select the one which is different from other alternatives.

A. (a) 22, 4, 5

B. (b) 34, 4, 8

C. (c) 37, 4, 9

D. (d) 54, 4, 13

Answer: C



Watch Video Solution

23. In each of the ing question select the one which is different from other alternatives.

A. 27

B. 64

C. 125

D. 144

Answer: D



Watch Video Solution

24. In each of the following question select the one which is different from other alternatives.

A. (a) 52, 68

B. (b) 63, 77

C. (c) 64, 80

D. (d) 50, 66

Answer: B



Watch Video Solution

25. In each of the ing question select the one which is different from other alternatives.

A. (a) 43

B. (b) 53

C. (c) 63

D. (d) 73

Answer: C



Watch Video Solution

26. In each of the ing question select the one which is different from other alternatives.

A. 21, 42

B. 24, 48

C. 37, 74

D. 35, 28

Answer: D



Watch Video Solution

27. In each of the following question select the one which is different from other alternatives.

A. 2

B. 5

C. 8

D. 11

Answer: C



Watch Video Solution

28. In each of the following question select the one which is different from other alternatives.

A. 44

B. 66

C. 132

D. 300

Answer: D



Watch Video Solution

29. In each of the following question select the one which is different from other alternatives.

A. (a) $32 - 41$

B. (b) $62 - 44$

C. (c) $46 - 28$

D. (d) $33 - 56$

Answer: D



Watch Video Solution

30. In each of the ing question select the one which is different from other alternatives.

A. 11 – 13

B. 11 – 17

C. 31 – 35

D. 23 – 29

Answer: C



Watch Video Solution

31. In each of the following question select the one which is different from other alternatives.

A. (a) 25

B. (b) 37

C. (c) 39

D. (d) 57

Answer: B



Watch Video Solution

32. In each of the ing question select the one which is different from other alternatives.

A. 6 : 34

B. 12 : 64

C. 20 : 96

D. 09 : 49

Answer: C



Watch Video Solution

33. In each of the ing question select the one which is different from other alternatives.

A. 124

B. 169

C. 225

D. 289

Answer: A



Watch Video Solution

34. In each of the ing question select the one which is different from other alternatives.

A. 55×5

B. 15×15

C. 5×45

D. 25×9

Answer: A



Watch Video Solution

35. In each of the following question select the one which is different from other alternatives.

A. (a) 36

B. (b) 16

C. (c) 81

D. (d) 243

Answer: D



Watch Video Solution

36. In each of the following question select the one which is different from other alternatives.

A. 1023 – 1046

B. 1169 – 1192

C. 1494 – 1517

D. 1899 – 1921

Answer: D



Watch Video Solution

37. In each of the question select the one which is different from other alternatives.

A. 64

B. 900

C. 343

D. 1000

Answer: B



Watch Video Solution

38. In each of the question select the one which is different from other alternatives.

A. $81 - 45$

B. $72 - 91$

C. $117 - 99$

D. $135 - 126$

Answer: B



Watch Video Solution

39. In each of the question select the one which is different from other alternatives.

A. $25 - 50$

B. $121 - 11$

C. $17 - 289$

D. $15 - 225$

Answer: A



Watch Video Solution

40. In each of the following question select the one which is different from other alternatives.

A. (a) (9, 36, 81)

B. (b) (32, 64, 88)

C. (c) (55, 135, 165)

D. (d) (35, 63, 78)

Answer: A



Watch Video Solution

41. In each of the following question select the one which is different from other alternatives.

A. $(37 - 74)$

B. $(52 - 26)$

C. $(47 - 84)$

D. $(88 - 44)$

Answer: C



Watch Video Solution

42. In each of the following question select the one which is different from other alternatives.

A. (a) 20, 16, 18

B. (b) 18, 14, 16

C. (c) 16, 12, 14

D. (d) 14, 11, 13

Answer: D



Watch Video Solution

43. In each of the following question select the one which is different from other alternatives.

A. 325, 36

B. 144, 169

C. 100, 121

D. 9, 64

Answer: D



Watch Video Solution

44. In each of the ing question select the one which is different from other alternatives.

A. 6243

B. 2643

C. 8465

D. 4867

Answer: D



Watch Video Solution

45. In each of the ing question select the one which is different from other alternatives.

A. $49 - 33$

B. $62 - 46$

C. $83 - 67$

D. $70 - 55$

Answer: D



Watch Video Solution

46. In each of the following question select the one which is different from other alternatives.

A. $(324, -18)$

B. $(441, 21)$

C. $(169, 13)$

D. $(186, 14)$

Answer: D



Watch Video Solution

47. In each of the ing question select the one which is different from other alternatives.

A. 206

B. 125

C. 27

D. 8

Answer: A



Watch Video Solution

48. In each of the ing question select the one which is different from other alternatives.

A. $66 - 56$

B. $101 - 90$

C. $41 - 30$

D. $33 - 22$

Answer: A



Watch Video Solution

49. In each of the ing question select the one which is different from other alternatives.

A. 357

B. 581

C. 698

D. 784

Answer: C



Watch Video Solution

50. In each of the ing question select the one which is different from other alternatives.

A. $392 - 21$

B. $483 - 15$

C. $602 - 42$

D. $917 - 35$

Answer: B



Watch Video Solution

51. In each of the following question select the one which is different from other alternatives.

A. 626

B. 841

C. 962

D. 1090

Answer: B



Watch Video Solution

52. In each of the following question select the one which is different from other alternatives.

A. (a) 5720

B. (b) 6710

C. (c) 2640

D. (d) 4270

Answer: D



Watch Video Solution

53. In each of the ing question select the one which is different from other alternatives.

A. $16 - 18$

B. $56 - 63$

C. $96 - 108$

D. $86 - 99$

Answer: D



Watch Video Solution

54. In each of the following options select the one which is different from other alternatives.

A. 125

B. 789

C. 236

D. 347

Answer: A



Watch Video Solution

55. In each of the ing question select the one which is different from other alternatives.

A. 162

B. 405

C. 567

D. 644

Answer: D



Watch Video Solution

56. In each of the following question select the one which is different from other alternatives.

A. 156

B. 201

C. 273

D. 345

Answer: A



Watch Video Solution

57. In each of the ing question select the one which is different from other alternatives.

A. $11 - 115$

B. $10 - 90$

C. $9 - 72$

D. $8 - 56$

Answer: A



Watch Video Solution

58. In each of the following question select the one which is different from other alternatives.

A. 1

B. 65

C. 8

D. 64

Answer: B



Watch Video Solution

59. In each of the ing question select the one which is different from other alternatives.

A. 945

B. 625

C. 743

D. 853

Answer: B



Watch Video Solution

60. In each of the ing question select the one which is different from other alternatives.

A. $120 - 560$

B. $91 - 299$

C. $78 - 169$

D. $104 - 429$

Answer: A



Watch Video Solution

61. In each of the following question select the one which is different from other alternatives.

A. (a) 30

B. (b) 18

C. (c) 24

D. (d) 26

Answer: D



Watch Video Solution

62. In each of the ing question select the one which is different from other alternatives.

A. $16 - 36$

B. $25 - 55$

C. $49 - 64$

D. $25 - 81$

Answer: B



Watch Video Solution

63. In each of the ing question select the one which is different from other alternatives.

A. $5 - 15 - 20$

B. $10 - 30 - 40$

C. $4 - 12 - 15$

D. $25 - 50 - 75$

Answer: C



Watch Video Solution

64. In each of the following question select the one which is different from other alternatives.

A. 22

B. 36

C. 66

D. 44

Answer: B



Watch Video Solution

65. In each of the ing question select the one which is different from other alternatives.

A. $52 - 61$

B. $43 - 54$

C. $72 - 83$

D. $18 - 29$

Answer: A



Watch Video Solution

66. In each of the following question select the one which is different from other alternatives.

A. 18, 36, 38

B. 14, 28, 56

C. 21, 42, 44

D. 16, 32, 34

Answer: B



Watch Video Solution

67. In each of the ing question select the one which is different from other alternatives.

A. 9

B. 16

C. 32

D. 25

Answer: C



Watch Video Solution

68. In each of the ing question select the one which is different from other alternatives.

A. $39 - 59$

B. $45 - 25$

C. $67 - 47$

D. $53 - 33$

Answer: C



Watch Video Solution

69. In each of the ing question select the one which is different from other alternatives.

A. 11

B. 8

C. 14

D. 66

Answer: A



Watch Video Solution

70. In each of the ing question select the one which is different from other alternatives.

A. 68

B. 88

C. 102

D. 238

Answer: B



Watch Video Solution

71. In each of the following options select the one which is different from other alternatives.

A. 143

B. 171

C. 117

D. 195

Answer: B



Watch Video Solution

72. In each of the following question select the one which is different from other alternatives.

A. (a) 9

B. (b) 6

C. (c) 7

D. (d) 5

Answer: A



Watch Video Solution

73. In each of the ing question select the one which is different from other alternatives.

A. 21

B. 55

C. 63

D. 49

Answer: B



Watch Video Solution

74. In each of the ing question select the one which is different from other alternatives.

A. $42 - 28$

B. $28 - 14$

C. $30 - 24$

D. $49 - 35$

Answer: C



Watch Video Solution

75. In each of the following question select the one which is different from other alternatives.

A. (a) 153, 45

B. (b) 165, 80

C. (c) 132, 36

D. (d) 124, 48

Answer: B



Watch Video Solution

76. In each of the ing question select the one which is different from other alternatives.

A. 28 – 49

B. 14 – 42

C. 35 – 63

D. 56 – 65

Answer: D



Watch Video Solution

77. In each of the ing question select the one which is different from other alternatives.

A. 36 — 63

B. 47 — 73

C. 58 — 85

D. 69 — 96

Answer: B



Watch Video Solution

78. In each of the ing question select the one which is different from other alternatives.

A. (24, 43)

B. (35 – 54)

C. (36, 64)

D. (21 – 14)

Answer: D



Watch Video Solution

79. In each of the ing question select the one which is different from other alternatives.

A. $72 - 43$

B. $68 - 40$

C. $85 - 57$

D. $55 - 27$

Answer: A



Watch Video Solution

80. In each of the following question select the one which is different from other alternatives.

A. (a) $46 - 23$

B. (b) $34 - 62$

C. (c) $61 - 44$

D. (d) $62 - 42$

Answer: A



Watch Video Solution

81. In each of the ing question select the one which is different from other alternatives.

A. 9

B. 42

C. 21

D. 20

Answer: A



Watch Video Solution

82. In each of the following options select the one which is different from other alternatives.

A. 36

B. 24

C. 48

D. 72

Answer: A



Watch Video Solution

83. In each of the following question select the one which is different from other alternatives.

A. (a) 25 and 55

B. (b) 36 and 44

C. (c) 33 and 48

D. (d) 19 and 61

Answer: D



Watch Video Solution

84. In the following question select the one which is different from other alternatives.

A.
$$\begin{bmatrix} a & b & c \\ b & c & a \\ c & a & b \end{bmatrix}$$

B.
$$\begin{bmatrix} + & - & + \\ - & \times & + \\ \times & + & - \end{bmatrix}$$

C.
$$\begin{bmatrix} \Delta & O & \Delta \\ O & \square & \Delta \\ \square & O & \Delta \end{bmatrix}$$

D.
$$\begin{bmatrix} 1 & 2 & 3 \\ 2 & 3 & 1 \\ 3 & 1 & 2 \end{bmatrix}$$

Answer: C



Watch Video Solution

85. In each of the ing question select the one which is different from other alternatives.

A. $9\frac{1}{11}$

B. $7\frac{9}{13}$

C. $5\frac{15}{17}$

D. $5\frac{6}{19}$

Answer: D



Watch Video Solution

86. In each of the ing question select the one which is different from other alternatives.

A. 1, 16, 255

B. 4, 13, 165

C. 6, 15, 219

D. 3, 14, 196

Answer: D



Watch Video Solution

87. In each of the ing question select the one which is different from other alternatives.

11-127, 9-85, 7-5, 35-29.

A. 11 – 127

B. 9 – 85

C. 7 – 53

D. 5 – 29

Answer: A



Watch Video Solution

88. In each of the ing question select the one which is different from other alternatives.

A. 8, 64, 512

B. 36, 6, 206

C. 48, 4, 202

D. 9, 27, 263

Answer: A



Watch Video Solution

89. In each of the following question select the one which is different from other alternatives.

A. (a) 65

B. (b) 85

C. (c) 35

D. (d) 25

Answer: D



Watch Video Solution

90. In each of the ing question select the one which is different from other alternatives.

A. $10 - 60$

B. $30 - 90$

C. $40 - 240$

D. $20 - 120$

Answer: B



Watch Video Solution

91. In each of the ing question select the one which is different from other alternatives.

A. $81 - 9$

B. $8 - 64$

C. $54 - 6$

D. $3 - 27$

Answer: B



Watch Video Solution

92. In each of the following question select the one which is different from other alternatives.

A. (a) 19

B. (b) 25

C. (c) 16

D. (d) 91

Answer: A



Watch Video Solution

93. Select the one which is different from other alternatives.

A. 26, 126

B. 65, 513

C. 10, 27

D. 17, 65

Answer: C



Watch Video Solution

94. In each of the ing question select the one which is different from other alternatives.

A. $6 - 13 - 24$

B. $12 - 19 - 30$

C. $18 - 25 - 34$

D. $24 - 31 - 42$

Answer: C



Watch Video Solution

95. In each of the ing question select the one which is different from other alternatives.

A. 2

B. 9

C. 63

D. 28

Answer: B



Watch Video Solution

96. In each of the ing question select the one which is different from other alternatives.

A. 9. 09

B. $\frac{909}{100}$

C. $9\frac{9}{100}$

D. $\frac{909}{1000}$

Answer: D



Watch Video Solution

97. In each of the following question select the one which is different from other alternatives.

A. (a) $16 - 25$

B. (b) $64 - 81$

C. (c) $36 - 49$

D. (d) $100 - 110$

Answer: D



Watch Video Solution

98. In each of the ing question select the one which is different from other alternatives.

A. $6 - 36$

B. $8 - 64$

C. $5 - 25$

D. $4 - 16$

Answer: C



Watch Video Solution

99. In each of the ing question select the one which is different from other alternatives.

A. $57 - 47$

B. $39 - 29$

C. $19 - 9$

D. $59 - 39$

Answer: D



Watch Video Solution

100. In each of the following question select the one which is different from other alternatives.

A. (a) $20 - 36$

B. (b) $30 - 46$

C. (c) $50 - 56$

D. (d) $60 - 66$

Answer: A



Watch Video Solution

101. In each of the ing question select the one which is different from other alternatives.

A. (48, 6)

B. (21, 7)

C. (24, 3)

D. (56, 7)

Answer: B



Watch Video Solution

102. In each of the following options select the one which is different from other alternatives.

A. 49

B. 140

C. 112

D. 97

Answer: A



Watch Video Solution

103. In each of the following options select the one which is different from other alternatives.

A. 15

B. 27

C. 37

D. 39

Answer: B



Watch Video Solution

104. In each of the following question select the one which is different from other alternatives.

A. (13, 40)

B. (14, 42)

C. (15, 46)

D. (16, 49)

Answer: B



Watch Video Solution

105. In each of the following options select the one which is different from other alternatives.

A. 119

B. 154

C. 85

D. 51

Answer: B



Watch Video Solution

106. In each of the ing question select the one which is different from other alternatives.

A. 64

B. 208

C. 316

D. 118

Answer: A



Watch Video Solution

107. In each of the ing question select the one which is different from other alternatives.

A. 36

B. 61

C. 84

D. 108

Answer: A



Watch Video Solution

108. In each of the ing question select the one which is different from other alternatives.

A. 81

B. 8

C. 16

D. 625

Answer: B



Watch Video Solution

109. In each of the following question select the one which is different from other alternatives.

A. $576 - 12$

B. $611 - 13$

C. $198 - 11$

D. $824 - 14$

Answer: D



Watch Video Solution

110. In each of the ing question select the one which is different from other alternatives.

A. 111

B. 242

C. 551

D. 383

Answer: B



Watch Video Solution

111. In each of the ing question select the one which is different from other alternatives.

A. $80 - 9$

B. $64 - 8$

C. $36 - 6$

D. $7 - 49$

Answer: A



Watch Video Solution

112. In each of the ing question select the one which is different from other alternatives.

A. 432

B. 583

C. 693

D. 671

Answer: A



Watch Video Solution

113. In each of the ing question select the one which is different from other alternatives.

A. $14 - 49$

B. $16 - 64$

C. $20 - 100$

D. $24 - 121$

Answer: D



Watch Video Solution

114. In each of the ing question select the one which is different from other alternatives.

A. 48

B. 36

C. 18

D. 34

Answer: B



Watch Video Solution

115. In each of the ing question select the one which is different from other alternatives.

A. $0 - 3 - 8$

B. $9 - 12 - 16$

C. $17 - 20 - 24$

D. $51 - 54 - 58$

Answer: A



Watch Video Solution

116. In each of the ing question select the one which is different from other alternatives.

A. 35

B. 64

C. 28

D. 84

Answer: B



Watch Video Solution

117. In each of the ing question select the one which is different from other alternatives.

A. $515 - 103$

B. $635 - 127$

C. $745 - 149$

D. $856 - 214$

Answer: D



Watch Video Solution

118. In each of the ing question select the one which is different from other alternatives.

A. 4

B. 25

C. 146

D. 625

Answer: C



Watch Video Solution

119. In each of the ing question select the one which is different from other alternatives.

A. $32 - 42$

B. $48 - 58$

C. $96 - 106$

D. $86 - 78$

Answer: D



Watch Video Solution

120. In each of the following question select the one which is different from other alternatives.

A. $58 - 85$

B. $96 - 69$

C. $38 - 83$

D. $47 - 73$

Answer: D



Watch Video Solution

121. Select the one which is different from other alternatives.

A. 363

B. 481

C. 1331

D. 5462

Answer: D



Watch Video Solution

122. In each of the following question select the one which is different from other alternatives.

A. $8 - 64$

B. $6 - 36$

C. $9 - 81$

D. $7 - 50$

Answer: D



Watch Video Solution

123. In each of the following question select the one which is different from other alternatives.

A. $121 - 196$

B. $144 - 225$

C. $36 - 83$

D. $16 - 49$

Answer: C



Watch Video Solution

124. In each of the ing question select the one which is different from other alternatives.

A. $5 - 58$

B. $6 - 69$

C. $7 - 80$

D. $8 - 90$

Answer: D



Watch Video Solution

125. In each of the following question select the one which is different from other alternatives.

A. (a) $49 - 100$

B. (b) $81 - 144$

C. (c) $24 - 64$

D. (d) $9 - 36$

Answer: C



Watch Video Solution

126. In each of the ing question select the one which is different from other alternatives.

A. 35

B. 37

C. 23

D. 19

Answer: A



Watch Video Solution

127. In each of the ing question select the one which is different from other alternatives.

A. 4, 12

B. 8, 16

C. 14, 24

D. 6, 14

Answer: C



Watch Video Solution

128. In each of the ing question select the one which is different from other alternatives.

A. $62 - 26$

B. $38 - 83$

C. $44 - 44$

D. $71 - 87$

Answer: D



Watch Video Solution

129. In each of the ing question select the one which is different from other alternatives.

A. 73

B. 53

C. 87

D. 67

Answer: C



Watch Video Solution

130. In each of the following question select the one which is different from other alternatives.

A. (a) $919 - 949$

B. (b) $646 - 686$

C. (c) $828 - 848$

D. (d) $434 - 464$

Answer: A



Watch Video Solution

131. In each of the ing question select the one which is different from other alternatives.

A. (a) $24 - 47$

B. (b) $38 - 61$

C. (c) $74 - 98$

D. (d) $54 - 77$

Answer: C



Watch Video Solution

132. In each of the ing question select the one which is different from other alternatives.

A. (a) 23

B. (b) 37

C. (c) 9

D. (d) 17

Answer: C



Watch Video Solution

133. In each of the ing question select the one which is different from other alternatives.

A. (a) $92 - 99$

B. (b) $48 - 54$

C. (c) $58 - 64$

D. (d) $89 - 95$

Answer: A



Watch Video Solution

134. In each of the ing question select the one which is different from other alternatives.

A. (a) 13 – 31

B. (b) 71 – 88

C. (c) 45 – 54

D. (d) 16 – 61

Answer: B



Watch Video Solution

135. In each of the ing question select the one which is different from other alternatives.

A. (a) $82 - 73$

B. (b) $66 - 68$

C. (c) $26 - 17$

D. (d) $55 - 46$

Answer: B



Watch Video Solution

136. In each of the ing question select the one which is different from other alternatives.

A. (a) 13

B. (b) 26

C. (c) 14

D. (d) 88

Answer: A



Watch Video Solution

137. In each of the ing question select the one which is different from other alternatives.

A. (a) $286 - 628$

B. (b) $397 - 739$

C. (c) $475 - 574$

D. (d) $369 - 936$

Answer: C



Watch Video Solution

138. In each of the following question select the one which is different from other alternatives.

A. (a) 123 – 148

B. (b) 139 – 164

C. (c) 156 – 181

D. (d) 177 – 201

Answer: D



Watch Video Solution

139. In each of the ing question select the one which is different from other alternatives.

A. (a) $21 - 37$

B. (b) $42 - 26$

C. (c) $35 - 51$

D. (d) $56 - 38$

Answer: D



Watch Video Solution

140. In each of the following question select the one which is different from other alternatives.

A. (a) 729

B. (b) 144

C. (c) 343

D. (d) 512

Answer: B



Watch Video Solution

141. In each of the ing question select the one which is different from other alternatives.

A. (a) 60

B. (b) 37

C. (c) 43

D. (d) 51

Answer: A



Watch Video Solution

142. In each of the following question select the one which is different from other alternatives.

A. (a) 65, 80

B. (b) 62, 78

C. (c) 50, 66

D. (d) 53, 69

Answer: A



Watch Video Solution

143. In each of the following question select the one which is different from other alternatives.

A. (a) 125

B. (b) 343

C. (c) 516

D. (d) 729

Answer: C



Watch Video Solution

144. In each of the following question select the one which is different from other alternatives.

A. (a) 100

B. (b) 64

C. (c) 125

D. (d) 216

Answer: A



Watch Video Solution

145. In each of the following question select the one which is different from other alternatives.

A. (a) 100

B. (b) 121

C. (c) 125

D. (d) 144

Answer: C



Watch Video Solution

146. In each of the ing question select the one which is different from other alternatives.

A. (a) 9

B. (b) 31

C. (c) 24

D. (d) 48

Answer: B



Watch Video Solution

147. In each of the following question select the one which is different from other alternatives.

A. $\frac{8}{9}$

B. $\frac{16}{64}$

C. $\frac{32}{25}$

D. $\frac{64}{36}$

Answer: B



Watch Video Solution

148. In each of the following question select the one which is different from other alternatives.

A. (a) 2010

B. (b) 2011

C. (c) 2012

D. (d) 2013

Answer: C



Watch Video Solution

149. In each of the following question select the one which is different from other alternatives.

A. (a) 500

B. (b) 413

C. (c) 112

D. (d) 433

Answer: D



Watch Video Solution

150. In each of the following question select the one which is different from other alternatives.

A. (a) $73 - 61$

B. (b) $57 - 69$

C. (c) $42 - 29$

D. (d) $47 - 59$

Answer: C



Watch Video Solution

151. In each of the ing question select the one which is different from other alternatives.

A. 275

B. 324

C. 325

D. 381

Answer: B



Watch Video Solution

152. In each of the ing question select the one which is different from other alternatives.

A. (a) 2016

B. (b) 3006

C. (c) 3016

D. (d) 3303

Answer: D



Watch Video Solution

153. In each of the following question select the one which is different from other alternatives.

A. (a) $31 - 64$

B. (b) $26 - 48$

C. (c) $43 - 65$

D. (d) $34 - 56$

Answer: A



Watch Video Solution

154. In each of the following question select the one which is different from other alternatives.

A. (a) 23

B. (b) 25

C. (c) 19

D. (d) 17

Answer: B



Watch Video Solution

155. In each of the following question select the one which is different from other alternatives.

A. 6121

B. 7364

C. 1036

D. 2710

Answer: A



Watch Video Solution

156. In each of the ing question select the one which is different from other alternatives.

A. $21 - 98$

B. $45 - 210$

C. $7 - 29$

D. $27 - 126$

Answer: C



Watch Video Solution

157. In each of the following question select the one which is different from other alternatives.

A. 111

B. 263

C. 383

D. 551

Answer: C



Watch Video Solution

158. In each of the following question select the one which is different from other alternatives.

A. $368 - 358$

B. $254 - 244$

C. $122 - 114$

D. $156 - 146$

Answer: C



Watch Video Solution

159. In each of the following question select the one which is different from other alternatives.

A. 36

B. 62

C. 144

D. 256

Answer: B



Watch Video Solution

160. In each of the following question select the one which is different from other alternatives.

A. (a) 325

B. (b) 360

C. (c) 230

D. (d) 256

Answer: D



Watch Video Solution

161. In each of the following question select the one which is different from other alternatives.

A. (a) $12 - 48$

B. (b) $18 - 54$

C. (c) $16 - 64$

D. (d) $14 - 56$

Answer: B



Watch Video Solution

162. In each of the ing question select the one which is different from other alternatives.

A. 1

B. 11

C. 21

D. 51

Answer: B



Watch Video Solution

163. In each of the following question select the one which is different from other alternatives.

A. 2

B. 3

C. 12

D. 24

Answer: B



Watch Video Solution

164. In each of the following question select the one which is different from other alternatives.

A. (a) 17

B. (b) 19

C. (c) 13

D. (d) 21

Answer: D



Watch Video Solution

165. In each of the following question select the one which is different from other alternatives.

A. (a) 8 : 64

B. (b) 7 : 49

C. (c) 6 : 30

D. (d) 5 : 25

Answer: C



Watch Video Solution

166. In each of the following question select the one which is different from other alternatives.

A. 443

B. 633

C. 821

D. 245

Answer: B



Watch Video Solution

167. In each of the ing question select the one which is different from other alternatives.

A. $3 - 9$

B. $4 - 8$

C. $9 - 3$

D. $7 - 6$

Answer: D



Watch Video Solution

168. In each of the following question select the one which is different from other alternatives.

A. (a) 240

B. (b) 304

C. (c) 272

D. (d) 210

Answer: D



Watch Video Solution

169. In each of the following question select the one which is different from other alternatives.

A. (a) $\frac{3}{7}$

B. (b) $\frac{7}{2}$

C. (c) $\frac{4}{13}$

D. (d) $\frac{13}{16}$

Answer: B



Watch Video Solution

170. In each of the following question select the one which is different from other alternatives.

A. $1 - 5$

B. $4 - 20$

C. $5 - 65$

D. $7 - 35$

Answer: C



Watch Video Solution

171. In each of the following question select the one which is different from other alternatives.

A. (a) $46 - 10$

B. (b) $42 - 33$

C. (c) $20 - 38$

D. (d) $91 - 12$

Answer: D



Watch Video Solution

172. In each of the following question select the one which is different from other alternatives.

A. (a) $(1, 0)$

B. (b) $(2, 3)$

C. (c) $(3, 8)$

D. (d) $(4, 27)$

Answer: B



Watch Video Solution

173. In each of the following question select the one which is different from other alternatives.

A. (a) (96, 24)

B. (b) (39, 18)

C. (c) (81, 54)

D. (d) (82, 64)

Answer: D



Watch Video Solution

174. In each of the following question select the one which is different from other alternatives.

A. (a) 24

B. (b) 56

C. (c) 84

D. (d) 94

Answer: D



Watch Video Solution

175. In each of the following question select the one which is different from other alternatives.

A. (a) 1942

B. (b) 1937

C. (c) 1935

D. (d) 1925

Answer: A



Watch Video Solution

176. In each of the following question select the one which is different from other alternatives.

A. 543, 453

B. 243, 432

C. 234, 342

D. 354, 543

Answer: A



Watch Video Solution

177. In each of the ing question select the one which is different from other alternatives.

A. 74, 7

B. 97, 9

C. 41, 4

D. 63, 6

Answer: B



Watch Video Solution

178. In each of the ing question select the one which is different from other alternatives.

A. $248 - 231$

B. $547 - 563$

C. $71 - 55$

D. $517 - 523$

Answer: A



Watch Video Solution

179. In each of the following question select the one which is different from other alternatives.

A. (25, 49)

B. (121, 169)

C. (7, 169)

D. (9, 25)

Answer: C



Watch Video Solution

180. In the following question select the one which is different from other alternatives.

A. 8465

B. 2643

C. 4867

D. 6243

Answer: B



Watch Video Solution

181. In each of the ing question select the one which is different from other alternatives.

A. (40, 70)

B. (27, 10)

C. (16, 13)

D. (32, 33)

Answer: B



Watch Video Solution

182. In each of the ing question select the one which is different from other alternatives.

A. (17, 71)

B. (23, 32)

C. (19, 90)

D. (46, 64)

Answer: C



Watch Video Solution

183. Select the one which is different from other alternatives.

A. $14 - 133$

B. $18 - 171$

C. $22 - 211$

D. $34 - 313$

Answer: C



Watch Video Solution

184. In each of the following question select the one which is different from other alternatives.

A. $18 - 26$

B. $30 - 37$

C. $54 - 62$

D. $77 - 85$

Answer: B



Watch Video Solution

185. In each of the following question select the one which is different from other alternatives.

A. $5 - 2$

B. $19 - 16$

C. $27 - 23$

D. $31 - 28$

Answer: C



Watch Video Solution

186. In each of the ing question select the one which is different from other alternatives.

A. 8 – 11

B. 1 – 4

C. 7 – 10

D. 3 – 5

Answer: D



Watch Video Solution

187. In each of the following question select the one which is different from other alternatives.

A. $9 - 26$

B. $11 - 36$

C. $13 - 42$

D. $7 - 18$

Answer: B



Watch Video Solution

188. In each of the following question select the one which is different from other alternatives.

A. (a) 679

B. (b) 124

C. (c) 568

D. (d) 345

Answer: D



Watch Video Solution

189. In each of the ing question select the one which is different from other alternatives.

A. 6

B. 24

C. 64

D. 120

Answer: C



Watch Video Solution

190. In each of the ing question select the one which is different from other alternatives.

A. 88

B. 97

C. 132

D. 121

Answer: B



Watch Video Solution

191. In each of the ing question select the one which is different from other alternatives.

A. 68

B. 85

C. 153

D. 174

Answer: C



Watch Video Solution

192. In each of the following question select the one which is different from other alternatives.

A. 7: 98

B. 9: 162

C. 12: 288

D. 17: 572

Answer: D



Watch Video Solution

193. Select the one which is different from other alternatives.

A. 289

B. 196

C. 169

D. 120

Answer: D



Watch Video Solution

194. In each of the following question select the one which is different from other alternatives.

A. $(97 - 16)$

B. $(78 - 15)$

C. $(58 - 13)$

D. $(69 - 14)$

Answer: D



Watch Video Solution

195. In each of the ing question select the one which is different from other alternatives.

A. 56

B. 28

C. 36

D. 35

Answer: C



Watch Video Solution

196. In each of the following question select the one which is different from other alternatives.

A. (a) 3 : 30

B. (b) 5 : 128

C. (c) 8 : 515

D. (d) 9 : 731

Answer: D



Watch Video Solution

197. In each of the ing question select the one which is different from other alternatives.

A. 222

B. 10

C. 68

D. 125

Answer: D



Watch Video Solution

198. In each of the following question select the one which is different from other alternatives.

A. $41 - 72$

B. $12 - 30$

C. $51 - 42$

D. $11 - 20$

Answer: A



Watch Video Solution

199. In each of the following question select the one which is different from other alternatives.

42:4, 48:6, 32:2, 15:5

A. 42:4

B. 48:6

C. 32:2

D. 15:5

Answer: A



Watch Video Solution

200. In each of the following question select the one which is different from other alternatives.

A. (a) Year 2012

B. (b) Year 1998

C. (c) Year 2005

D. (d) Year,1997

Answer: A



Watch Video Solution

201. In each of the question select the one which is different from other alternatives.

A. 101

B. 212

C. 326

D. 111

Answer: A



Watch Video Solution

202. In each of the following question select the one which is different from other alternatives.

A. $64 - 36$

B. $75 - 35$

C. $57 - 43$

D. $39 - 61$

Answer: A



Watch Video Solution

203. In each of the question select the one which is different from other alternatives.

A. $12 - 144$

B. $13 - 156$

C. $15 - 180$

D. $16 - 1760$

Answer: D



Watch Video Solution

204. In each of the question select the one which is different from other alternatives.

A. 36

B. 96

C. 16

D. 80

Answer: A



Watch Video Solution

205. In each of the question select the one which is different from other alternatives.

A. 41, 4

B. 83, 6

C. 74, 7

D. 97, 9

Answer: B



Watch Video Solution

206. In each of the question select the one which is different from other alternatives.

A. 24

B. 28

C. 28

D. 56

Answer: C



Watch Video Solution

207. In each of the question select the one which is different from other alternatives.

A. 63

B. 69

C. 65

D. 66

Answer: D



Watch Video Solution

208. Select the one which is different from other alternatives.

A. 108

B. 91

C. 1449

D. 225

Answer: B



Watch Video Solution

209. In each of the following question select the one which is different from other alternatives.

A. (a) $187:11$

B. (b) $194:12$

C. (c) $195:13$

D. (d) $224:14$

Answer: B



Watch Video Solution

210. In each of the question select the one which is different from other alternatives.

A. 1625

B. 3649

C. 6481

D. 5025

Answer: D



Watch Video Solution

211. In each of the question select the one which is different from other alternatives.

A. 512

B. 625

C. 1296

D. 2401

Answer: A



Watch Video Solution

212. Select the one which is different from other alternatives.

A. 1, 2, 4, 7

B. 2, 3, 4, 9

C. 3, 2, 4, 8

D. 4, 2, 3, 9

Answer: A



Watch Video Solution

213. In each of the following question select the one which is different from other alternatives.

A. (a) 9, 10

B. (b) 24, 25

C. (c) 2, 3

D. (d) 20, 21

Answer: A



Watch Video Solution

214. In each of the following question select the one which is different from other alternatives.

A. (a) 83

B. (b) 64

C. (c) 56

D. (d) 98

Answer: B



Watch Video Solution

215. In each of the question select the one which is different from other alternatives.

A. 45, 6, 7

B. 15, 3, 4

C. 35, 5, 6

D. 23, 4, 5

Answer: C



Watch Video Solution

216. In each of the question select the one which is different from other alternatives.

A. 725

B. 840

C. 632

D. 475

Answer: C



Watch Video Solution

217. In each of the following questions, find the odd number from the given alternatives

A. 14 – 16

B. 56 – 64

C. 77 – 88

D. 80 – 93

Answer: D



Watch Video Solution

218. In each of the following questions, find the odd number from the given alternatives

A. $13 - 21$

B. $19 - 27$

C. $15 - 23$

D. $16 - 24$

Answer: D



Watch Video Solution

219. In each of the following questions, find the odd number from the given alternatives

A. (a) 38

B. (b) 39

C. (c) 40

D. (d) 41

Answer: D



Watch Video Solution

220. In each of the following questions, find the odd number from the given alternatives

A. 101

B. 121

C. 111

D. 131

Answer: B



Watch Video Solution

221. In each of the following questions, find the odd number from the given alternatives

A. $\frac{10}{8}$

B. $\frac{8}{7}$

C. $\frac{5}{6}$

D. $\frac{7}{5}$

Answer: C



Watch Video Solution

222. In each of the following questions, find the odd number from the given alternatives

A. (a) 9

B. (b) 17

C. (c) 64

D. (d) 8

Answer: A



Watch Video Solution

223. In each of the following questions, find the odd number from the given alternatives,
1876,1984,2024,2014

A. 1876

B. 1984

C. 2024

D. 2014

Answer: D



Watch Video Solution

224. In each of the following questions, find the odd number from the given alternatives

A. $3 - 9$

B. $5 - 25$

C. $7 - 49$

D. $8 - 64$

Answer: D



Watch Video Solution

225. In each of the following questions, find the odd number from the given alternatives

A. (47, 49)

B. (29, 31)

C. (5, 7)

D. (11, 13)

Answer: A



Watch Video Solution

226. In each of the following questions, find the odd number from the given alternatives, 8110, 1234, 9100, 1189.

A. 8110

B. 1234

C. 9100

D. 1189

Answer: D



Watch Video Solution

227. In each of the following questions, find the odd number from the given alternatives

A. $32 - 5$

B. $44 - 7$

C. $38 - 6$

D. $59 - 8$

Answer: D



Watch Video Solution

228. In each of the following questions, find the odd number from the given alternatives

A. 144

B. 125

C. 343

D. 64

Answer: D



Watch Video Solution

229. In each of the following questions, find the odd number from the given alternatives

A. 5061

B. 4025

C. 7202

D. 6023

Answer: A



Watch Video Solution

230. In each of the following questions, find the odd number from the given alternatives

A. (a) 104 : 78

B. (b) 96 : 80

C. (c) 64 : 48

D. (d) 80 : 60

Answer: B



Watch Video Solution

231. In each of the following questions, find the odd number from the given alternatives,
(69,23),(56,19),(108,36),(42,14)

A. (69, 23)

B. (56, 19)

C. (108, 36)

D. (42, 14)

Answer: B



Watch Video Solution

232. In each of the following questions, find the odd number from the given alternatives
13,46,20,72.

A. 13

B. 46

C. 20

D. 72

Answer: A



Watch Video Solution

233. In the of the following questions, find the odd number from the given alternatives

A. 1331

B. 191

C. 200

D. 808

Answer: A



Watch Video Solution

234. In the following questions, find the odd number from the given alternatives

A. 428

B. 338

C. 326

D. 329

Answer: B



Watch Video Solution

235. In each of the following questions, find the odd number from the given alternatives

A. $34 - 30$

B. $44 - 31$

C. $61 - 12$

D. $25 - 21$

Answer: B



Watch Video Solution

236. In each of the following questions, find the odd number from the given alternatives

A. $35 - 66$

B. $71 - 94$

C. $24 - 57$

D. $56 - 70$

Answer: D



Watch Video Solution

237. In each of the following questions, find the odd number from the given alternatives

A. (a) 125

B. (b) 343

C. (c) 516

D. (d) 729

Answer: C



Watch Video Solution

238. In each of the following questions, find the odd number from the given alternatives

A. 22

B. 18

C. 12

D. 15

Answer: A



Watch Video Solution

239. In each of the following questions, find the odd number from the given alternatives

A. 424

B. 631

C. 432

D. 460

Answer: B



Watch Video Solution

240. In each of the following questions, find the odd number from the given alternatives

Find out the odd number pair.

A. $57 - 75$

B. $12 - 21$

C. $15 - 41$

D. $57 - 75$

Answer: D



Watch Video Solution

241. In each of the following questions, find the odd number from the given alternatives

Find out the odd number pair.

A. (61, 244)

B. (24, 96)

C. (27, 135)

D. (54, 216)

Answer: C



Watch Video Solution

242. In each of the following questions, find the odd number from the given alternatives.

A. (a) 564327

B. (b) 368127

C. (c) 876321

D. (d) 742956

Answer: D



Watch Video Solution

243. In the following questions, find the odd number from the given alternatives

A. 12

B. 17

C. 15

D. 6

Answer: B



Watch Video Solution

244. In the following questions, find the odd number from the given alternatives

A. 8948

B. 3463

C. 6514

D. 3463

Answer: B



Watch Video Solution

245. In the following questions, find the odd number from the given alternatives

A. 853

B. 532

C. 734

D. 751

Answer: D



Watch Video Solution

246. In each of the following questions, find the odd number from the given alternatives,
4367, 3245, 6578, 7689

A. 4367

B. 3245

C. 6578

D. 7689

Answer: A



Watch Video Solution

247. In each of the following questions, find the odd number from the given alternatives, 16:128, 12:96, 13:117, 15:120.

A. 16: 128

B. 12: 96

C. 13: 117

D. 15: 120

Answer: C



Watch Video Solution

248. In each of the following questions, find the odd number from the given alternatives

A. 42: 2

B. 81: 9

C. 24: 6

D. 54: 17

Answer: D



Watch Video Solution

249. In each of the following questions, find the odd number from the given alternatives

A. 2518

B. 3249

C. 2709

D. 8314

Answer: C



Watch Video Solution

250. In each of the following questions, find the odd number from the given alternatives

A. 36

B. 66

C. 76

D. 56

Answer: A



Watch Video Solution

251. In each of the following questions, find the odd number from the given alternatives

A. (45, 18)

B. (36, 27)

C. (23, 14)

D. (82, 29)

Answer: D



Watch Video Solution

252. In each of the following questions, find the odd number from the given alternatives

A. 51530

B. 41220

C. 2610

D. 3915

Answer: D



Watch Video Solution

253. In each of the following questions, find the odd number from the given alternatives

A. (a) 65

B. (b) 126

C. (c) 28

D. (d) 215

Answer: D



Watch Video Solution

254. In each of the following questions, find the odd number from the given alternatives

A. (a) 166

B. (b) 131

C. (c) 137

D. (d) 163

Answer: A



Watch Video Solution

255. In each of the following questions, find the odd number from the given alternatives

A. 8 : 25

B. 15 : 46

C. 6 : 22

D. 13 : 40

Answer: C



Watch Video Solution

256. In each of the following questions, find the odd number from the given alternatives

A. 343

B. 125

C. 216

D. 100

Answer: D



Watch Video Solution

257. In each of the following questions, find the odd number from the given alternatives

A. 21

B. 81

C. 51

D. 71

Answer: D



Watch Video Solution

258. In the following questions, find the odd number from the given alternatives

A. 16

B. 56

C. 128

D. 2

Answer: A



Watch Video Solution

259. In each of the following questions, find the odd number from the given alternatives

A. 47632

B. 32418

C. 67626

D. 84129

Answer: A



Watch Video Solution

260. In each of the following questions, find the odd number from the given alternatives

A. 49

B. 36

C. 65

D. 100

Answer: C



Watch Video Solution

261. In each of the following questions, find the odd number from the given alternatives

A. 28, 82

B. 24, 44

C. 99, 99

D. 36, 63

Answer: B



Watch Video Solution

262. In each of the following questions, find the odd number from the given alternatives

A. 84, 67

B. 112, 95

C. 79, 63

D. 167, 150

Answer: C



Watch Video Solution

263. In each of the following questions, find the odd number pair from the given alternatives.

A. $19 - 38$

B. $21 - 40$

C. $23 - 46$

D. $16 - 32$

Answer: B



Watch Video Solution

264. In each of the following questions, find the odd number pair from the given alternatives.

A. 91

B. 84

C. 26

D. 78

Answer: B



Watch Video Solution

265. In each of the following questions, find the odd number pair from the given alternatives.

A. 96

B. 59

C. 12

D. 48

Answer: B



Watch Video Solution

266. Find the odd number pair from the given alternatives.

A. $43 - 6$

B. $28 - 4$

C. $50 - 7$

D. $36 - 5$

Answer: B



Watch Video Solution

267. Find the odd number-pair from the given alternatives.

A. (a) $8 - 11$

B. (b) $1 - 4$

C. (c) $7 - 10$

D. (d) $3 - 5$

Answer: D



Watch Video Solution

268. Select the odd number from the given alternatives.

A. 160

B. 240

C. 360

D. 480

Answer: A



Watch Video Solution

269. Select the odd number from the given alternatives. 1001,715,429,390

A. 1001

B. 715

C. 429

D. 390

Answer: D



Watch Video Solution

270. Select the odd number from the given alternatives.

A. 195

B. 221

C. 247

D. 323

Answer: D



Watch Video Solution

271. Select the odd number-pair from the given alternatives.

A. $1024 - 2048$

B. $16 - 512$

C. $192 - 256$

D. $32 - 128$

Answer: C



Watch Video Solution

272. Find the odd number from the given alternatives.

A. 484

B. 529

C. 625

D. 566

Answer: D



Watch Video Solution

273. Find the odd number pair from the given alternatives.

A. $73 - 61$

B. $57 - 69$

C. $47 - 59$

D. $42 - 29$

Answer: D



Watch Video Solution

274. In each of the following questions, find the odd number from the given alternatives.

A. 625

B. 50625

C. 225

D. 3375

Answer: D



Watch Video Solution

275. In each of the following questions, find the odd number from the given alternatives.

A. 25

B. 15

C. 18

D. 21

Answer: A



Watch Video Solution

276. Select the odd number-pair from the given alternatives.

A. $36 - 145$

B. $16 - 063$

C. $91 - 363$

D. $64 - 255$

Answer: A



Watch Video Solution

277. Select the odd number from the given alternatives.

A. 169

B. 196

C. 255

D. 289

Answer: C



Watch Video Solution

278. Select the odd number from the given alternatives.

A. A) 95

B. B) 145

C. C) 114

D. D) 152

Answer: B



Watch Video Solution

279. Select the odd number from the given alternatives.

A. 18

B. 40

C. 82

D. 180

Answer: C



Watch Video Solution

280. Select the odd number from the given alternatives. 18981, 64354, 93892, 56138

A. 18981

B. 64354

C. 93892

D. 56138

Answer: A



Watch Video Solution

281. Find the odd number pair from the given alternatives.

A. (a) 14, 12

B. (b) 24, 7

C. (c) 42, 4

D. (d) 37, 4

Answer: D



Watch Video Solution

282. Find the odd number from the given alternatives.

A. 245

B. 443

C. 633

D. 843

Answer: C



Watch Video Solution

283. Find the odd number pair from the given alternatives.

A. (a) $140 \rightarrow 45$

B. (b) $110 \rightarrow 35$

C. (c) $100 \rightarrow 30$

D. (d) $80 \rightarrow 25$

Answer: C



Watch Video Solution

284. Find out the odd number pair from the given alternatives

A. 16, 32

B. 20, 40

C. 64, 81

D. 81, 162

Answer: C



Watch Video Solution

285. Find the odd number from the given alternatives.

A. 64

B. 900

C. 343

D. 1000

Answer: B



Watch Video Solution

286. Find the odd number from the given alternatives.

A. 13

B. 17

C. 29

D. 87

Answer: D



Watch Video Solution

287. Find the odd number pair from the given alternatives.

A. (85, 136)

B. (34, 85)

C. (102, 153)

D. (63, 162)

Answer: D



Watch Video Solution

288. Find the odd number pair from the given alternatives.

15–21, 32–41, 22–27, 31–35

A. 15 – 21

B. 32 – 41

C. 22 – 27

D. 31 – 35

Answer: A



Watch Video Solution

289. Find the odd number-pair from the given alternatives :

A. 81 : 243

B. 16 : 64

C. 64 : 192

D. 25 : 75

Answer: B



Watch Video Solution

290. Find the odd number from the given alternatives.

11, 17, 19, 21

A. 11

B. 17

C. 19

D. 21

Answer: D



Watch Video Solution

291. Find the odd number pair from the given alternatives.

A. $52 - 61$

B. $43 - 54$

C. $72 - 83$

D. $18 - 29$

Answer: A



Watch Video Solution

292. Find the odd number from the given alternatives :

A. $63 - 36$

B. $45 - 74$

C. $48 - 84$

D. $26 - 62$

Answer: B



Watch Video Solution

293. Find the odd number-pair from the given alternatives :

A. $65 - 90$

B. $73 - 97$

C. $112 - 137$

D. $162 - 187$

Answer: B



Watch Video Solution

294. Find the odd number pair from the given alternatives.

A. 70, 80

B. 54, 62

C. 28, 32

D. 21, 24

Answer: B



Watch Video Solution

295. Find the odd number from the given alternatives.

A. 1629

B. 3418

C. 2349

D. 1834

Answer: D



Watch Video Solution

296. Find the odd number from the given alternatives :

A. 93

B. 79

C. 97

D. 89

Answer: A



Watch Video Solution

297. Find the odd number from the given alternatives.

A. 6

B. 24

C. 64

D. 120

Answer: C



Watch Video Solution

298. Find the odd number-pair from the given alternatives :

A. $46 - 52$

B. $56 - 62$

C. $66 - 72$

D. $76 - 84$

Answer: D



Watch Video Solution

299. Find the odd number pair from the given alternatives :

A. 1 : 8

B. 27 : 64

C. 125 : 218

D. 343 : 512

Answer: C



Watch Video Solution

300. Find the odd number-pair from the given alternatives :

A. $41 - 72$

B. $12 - 30$

C. $51 - 42$

D. $11 - 20$

Answer: A



Watch Video Solution

301. Find the odd number pair from the given alternatives :

(3,12), (2,6), (6,42) , (5,35)

A. (3, 12)

B. (2, 6)

C. (6, 42)

D. (5, 35)

Answer: D



Watch Video Solution

302. Find the odd number pair from the given alternatives :37, 120, 145, 50

A. 37

B. 120

C. 145

D. 50

Answer: B



Watch Video Solution

303. Find the odd number pair from the given alternatives :

A. $24 - 42$

B. $36 - 63$

C. $37 - 73$

D. $35 - 51$

Answer: D



Watch Video Solution

304. Find the odd number pair from the given alternatives :

A. $5 - 21$

B. $29 - 45$

C. $48 - 68$

D. $71 - 87$

Answer: C



Watch Video Solution

305. Find the odd number from the given alternatives :

A. 24

B. 49

C. 64

D. 81

Answer: A



Watch Video Solution

306. Find the odd number pair from the given alternatives :

A. 6, 612

B. 5, 521

C. 4, 46

D. 7, 543

Answer: D



Watch Video Solution

307. Find the odd number from the given alternatives :

A. 64

B. 125

C. 225

D. 216

Answer: C



Watch Video Solution

308. Find the odd number pair from the given alternatives :

A. 5, 124

B. 7, 342

C. 3, 26

D. 2, 15

Answer: D



Watch Video Solution

309. Find out the odd number from the given alternatives :

A. 56

B. 72

C. 90

D. 64

Answer: D



Watch Video Solution

310. Find the odd number pair from the given alternatives :

A. (a) $16 - 28$

B. (b) $20 - 30$

C. (c) $30 - 40$

D. (d) $40 - 50$

Answer: A



Watch Video Solution

311. Find the odd number pair from the given alternatives :

A. $36 - 72$

B. $17 - 34$

C. $28 - 49$

D. $24 - 48$

Answer: C



Watch Video Solution

312. Find the odd number from the given alternatives :

A. 132

B. 176

C. 279

D. 352

Answer: C



Watch Video Solution

313. Find the odd number pair from the given alternatives :

A. $36 - 48$

B. $56 - 44$

C. $78 - 66$

D. $33 - 64$

Answer: D



Watch Video Solution

314. Find the odd number from the given alternatives :

A. 36

B. 64

C. 54

D. 108

Answer: B



Watch Video Solution

315. Find the odd number pair from the given alternatives :

A. $36 - 48$

B. $56 - 44$

C. $78 - 66$

D. $33 - 64$

Answer: D



Watch Video Solution

316. Find the odd number from the given alternatives :

A. 16

B. 4

C. 2

D. 36

Answer: C



Watch Video Solution

317. Find the odd number from the given alternatives :

A. 343

B. 64

C. 75

D. 27

Answer: C



Watch Video Solution

318. Find the odd numbers from the given alternatives :

A. 1, 0.75, 0.5, 1.25

B. 4, 3, 2, 5

C. 1, 4, 2, 8

D. 2, 1.5, 1, 2.5

Answer: C



Watch Video Solution

319. Find the odd number pair from the given alternatives :

A. 48: 134

B. 40: 110

C. 18: 48

D. 30: 80

Answer: C



Watch Video Solution

320. Find the odd number-pair from the given alternatives :

A. $28 - 21$

B. $31 - 38$

C. $45 - 52$

D. $64 - 71$

Answer: A



Watch Video Solution

321. Find the odd number pair from the given alternatives :

A. (a) $52 - 61$

B. (b) $72 - 81$

C. (c) $54 - 63$

D. (d) $33 - 41$

Answer: D



Watch Video Solution

322. Find the odd number-pair from the given alternatives :

A. $4 - 16$

B. $8 - 24$

C. $14 - 26$

D. $16 - 36$

Answer: C



Watch Video Solution

323. Find out the odd number pairs from the given alternatives :

A. $8 - 36$

B. $16 - 64$

C. $36 - 216$

D. $25 - 125$

Answer: A



Watch Video Solution

324. Find out the odd number from the given alternatives :

A. 248

B. 3612

C. 4810

D. 51020

Answer: C



Watch Video Solution

325. Find out the odd number from the given alternatives :

A. (a) 125

B. (b) 512

C. (c) 1321

D. (d) 1728

Answer: C



Watch Video Solution

326. Find out the odd number from the given alternatives :

A. (a) 125

B. (b) 512

C. (c) 1331

D. (d) 1728

Answer: D



Watch Video Solution

327. Find out the odd number from the given alternatives :

A. 2378

B. 9122

C. 1517

D. 2345

Answer: A



Watch Video Solution

328. Find out the odd number from the given alternatives :

A. 15

B. 17

C. 19

D. 13

Answer: A



Watch Video Solution

329. Find out the odd number from the given alternatives :

A. 5125

B. 8564

C. 7343

D. 6216

Answer: B



Watch Video Solution

330. Find out the odd number from the given alternatives :

A. 529

B. 549

C. 731

D. 525

Answer: A



Watch Video Solution

331. Select the odd number from the given alternatives :

A. 25

B. 49

C. 81

D. 121

Answer: C



Watch Video Solution

332. Select the odd number from the given alternatives :

A. 1331

B. 121

C. 11

D. 133

Answer: D



Watch Video Solution

333. Find out the odd number from the given alternatives :

A. 2378

B. 9122

C. 1517

D. 2345

Answer: A



Watch Video Solution

334. Find out the odd number from the given alternatives :

A. 56

B. 72

C. 90

D. 64

Answer: D



Watch Video Solution

335. Select the odd number from the given alternatives :

A. 306

B. 270

C. 132

D. 240

Answer: B



Watch Video Solution

336. Select the odd number from the given alternatives :

A. (a) 8324

B. (b) 9344

C. (c) 7213

D. (d) 8729

Answer: B



Watch Video Solution

337. Select the odd number from the given alternatives : 23498, 9494, 6946, 15578

A. 23498

B. 9494

C. 6946

D. 15578

Answer: C



Watch Video Solution

338. Select the odd number from the given alternatives :

1541, 4096, 1331, 4913

A. 1541

B. 4096

C. 1331

D. 4913

Answer: B



Watch Video Solution

339. Select the odd number from the given alternatives :

A. 12

B. 24

C. 80

D. 48

Answer: A



Watch Video Solution

340. Select the odd number from the given alternatives :

A. 7642

B. 4520

C. 3927

D. 5841

Answer: D



Watch Video Solution

341. Select the odd number from the given alternatives :

A. 8

B. 64

C. 125

D. 343

Answer: B



Watch Video Solution

342. Select the odd number from the given alternatives :

A. (a) 844

B. (b) 972

C. (c) 716

D. (d) 345

Answer: D



Watch Video Solution

343. Select the odd number from the given alternatives :

A. (a) 746

B. (b) 692

C. (c) 581

D. (d) 737

Answer: D



Watch Video Solution

344. Select the odd number from the given alternatives :

A. 195

B. 168

C. 224

D. 240

Answer: D



Watch Video Solution

345. Choose the odd number from the given alternatives :

A. 512

B. 841

C. 576

D. 289

Answer: A



Watch Video Solution

346. Choose the odd number from the given alternatives :

A. 165

B. 792

C. 852

D. 671

Answer: C



Watch Video Solution

347. Find the odd number from the given alternatives.

A. 119

B. 85

C. 51

D. 154

Answer: D



Watch Video Solution

348. In the following questions, select the odd number from the given alternatives :

A. 63

B. 23

C. 17

D. 13

Answer: A



Watch Video Solution

349. In the following question, select the odd number-pair from the given alternatives :

A. $12 - 48$

B. $7 - 28$

C. $5 - 20$

D. $11 - 55$

Answer: D



Watch Video Solution

350. In the following question, select the odd number pair from the given alternatives :

12-28, 7-28, 5-20, 11-15

A. 12 – 28

B. 7 – 28

C. 5 – 20

D. 11 – 15

Answer: D



Watch Video Solution

351. In the following question, select the odd number pair from the given alternatives :

A. (a) $422 - 8$

B. (b) $382 - 18$

C. (c) $718 - 16$

D. (d) $318 - 12$

Answer: B



Watch Video Solution

352. In the following question, select the odd number pair from the given alternatives :

A. $64 - 109$

B. $36 - 83$

C. $42 - 87$

D. $102 - 147$

Answer: B



Watch Video Solution

353. In the following question, select the odd number pair from the given alternatives :

A. $11 - 44$

B. $12 - 72$

C. $13 - 52$

D. $14 - 48$

Answer: D



Watch Video Solution

354. In the following question, select the odd number pair from the given alternatives :

A. $5 - 30$

B. $12 - 84$

C. $11 - 66$

D. $8 - 48$

Answer: B



Watch Video Solution

355. In the following question, select the odd number pair from the given alternatives :

A. $24 - 6$

B. $48 - 12$

C. $72 - 24$

D. $44 - 11$

Answer: C



Watch Video Solution

356. In the following question, select the odd number pair from the given alternatives :

A. $14 - 48$

B. $12 - 72$

C. $11 - 88$

D. $8 - 24$

Answer: A



Watch Video Solution

357. In the following question, select the odd number pair from the given alternatives :

A. $52 - 164$

B. $60 - 162$

C. $44 - 146$

D. $112 - 214$

Answer: A



Watch Video Solution

358. In the following question, select the odd number pair from the given alternatives :

A. $27 - 118$

B. $33 - 132$

C. $41 - 164$

D. $73 - 292$

Answer: A



Watch Video Solution

359. In the following question, select the odd number pair from the given alternatives :

A. (a) $64 - 576$

B. (b) $17 - 343$

C. (c) $27 - 196$

D. (d) $32 - 36$

Answer: B



Watch Video Solution

360. In the following question, select the odd number from the given alternatives : 361, 441, 784, 876

A. 361

B. 441

C. 784

D. 876

Answer: D



Watch Video Solution

361. In the following question, select the odd number from the given alternatives : 253, 473, 143, 633

A. 253

B. 473

C. 143

D. 633

Answer: D



Watch Video Solution

362. In the following question, select the odd number group from the given alternatives :

A. (a) (4, 16, 48)

B. (b) (6, 36, 90)

C. (c) (8, 64, 160)

D. (d) (12, 144, 360)

Answer: A



Watch Video Solution

363. In the following question, select the odd number from the given alternatives :

A. (a) 234

B. (b) 345

C. (c) 243

D. (d) 432

Answer: B



Watch Video Solution

364. In the following question, select the odd number-pair from the given alternatives :

A. (a) $2132 - 161$

B. (b) $2678 - 672$

C. (c) $4325 - 120$

D. (d) $6931 - 162$

Answer: A



Watch Video Solution

365. In the following question, select the odd number from the given alternatives :

A. 31

B. 37

C. 43

D. 49

Answer: D



Watch Video Solution

366. In the following question, select the odd number from the given alternatives :

A. 145

B. 463

C. 581

D. 651

Answer: B



Watch Video Solution

367. In the following question, select the odd number pair from the given alternatives:

A. (a) $11 - 121$

B. (b) $13 - 169$

C. (c) $19 - 391$

D. (d) $21 - 441$

Answer: C



Watch Video Solution

368. In the following question, select. the odd number from the given alternatives :

A. 71

B. 83

C. 89

D. 93

Answer: D



Watch Video Solution

369. Select the odd number from the given alternatives :

A. 169

B. 421

C. 529

D. 289

Answer: B



Watch Video Solution

370. Select the odd number from the given alternatives : 8, 27, 100, 125

A. 8

B. 27

C. 100

D. 125

Answer: C



Watch Video Solution

371. Select the odd number from the given alternatives : 24, 39, 65, 51

A. 24

B. 39

C. 65

D. 51

Answer: C



Watch Video Solution

372. Select the odd number from the given alternatives :

A. 49

B. 25

C. 8

D. 36

Answer: C



Watch Video Solution

373. Select the odd number from the given alternatives :

A. (a) 42

B. (b) 84

C. (c) 91

D. (d) 71

Answer: D



Watch Video Solution

374. In the following question, select the odd number pair from the given alternatives.

A. $9 - 90$

B. $6 - 42$

C. $5 - 30$

D. $4 - 36$

Answer: D



Watch Video Solution

375. In the following question, select the odd number pair from the given alternatives.

A. $3 - 28$

B. $2 - 9$

C. $5 - 124$

D. $4 - 65$

Answer: C



Watch Video Solution

376. In the following question, select the odd number-pair from the given alternatives :

A. $7 - 81$

B. $9 - 121$

C. $11 - 169$

D. $5 - 47$

Answer: D



Watch Video Solution

377. In the following question, select the odd number-pair from the given alternatives :

11-110, 9-72, 7-42, 5-30

A. 11 – 110

B. 9 – 72

C. 7 – 42

D. 5 – 30

Answer: D



Watch Video Solution

378. In the following question, select the odd number pair from the given alternatives :

11-121, 13-199, 14-196, 15-225,

A. 11 – 121

B. 13 – 199

C. 14 – 196

D. 15 – 225

Answer: B



Watch Video Solution

379. In the following question, select the odd number pair from the given alternatives :

A. $6 - 217$

B. $5 - 126$

C. $4 - 63$

D. $3 - 28$

Answer: C



Watch Video Solution

380. In the following question, select the odd number-pair from the given alternatives :

A. (a) 13 : 25

B. (b) 31 : 63

C. (c) 21 : 41

D. (d) 19 : 37

Answer: B



Watch Video Solution

381. In the following question, select the odd number-pair from the given alternatives :

A. (a) $10 - 30$

B. (b) $11 - 33$

C. (c) $50 - 150$

D. (d) $13 - 37$

Answer: D



Watch Video Solution

382. In the following question, select the odd number-pair from the given alternatives :

A. 18 : 37

B. 24 : 47

C. 32 : 65

D. 48 : 97

Answer: B



Watch Video Solution

383. In the following question, select the odd number-pair from the given alternatives :

A. $121 - 196$

B. $441 - 484$

C. $25 - 36$

D. $169 - 196$

Answer: A



Watch Video Solution

384. In the following question, select the odd number-pair from the given alternatives :

A. $47 - 74$

B. $49 - 96$

C. $63 - 36$

D. $97 - 79$

Answer: B



Watch Video Solution

385. In the following question, select the odd number-pair from the given alternatives :

A. $138 - 12$

B. $237 - 11$

C. $438 - 15$

D. $961 - 16$

Answer: B



Watch Video Solution

386. In the following question, select the odd number from the given alternatives :

A. (a) 41

B. (b) 97

C. (c) 63

D. (d) 59

Answer: C



Watch Video Solution

387. In the following question, select the odd number-pair from the given alternatives :

A. $3 - 27$

B. $2 - 8$

C. $4 - 64$

D. $7 - 49$

Answer: D



Watch Video Solution

388. In the following question, select the odd number-pair from the given alternatives :

A. (a) $5 - 35$

B. (b) $6 - 42$

C. (c) $8 - 64$

D. (d) $11 - 77$

Answer: C



Watch Video Solution

389. In the following question, select the odd number-pair from the given alternatives :

A. (a) $20 - 30$

B. (b) $35 - 45$

C. (c) $45 - 55$

D. (d) $25 - 30$

Answer: D



Watch Video Solution

390. Select the odd one out from the given alternatives.

A. (1, 11, 1111)

B. (2, 22, 4444)

C. (4, 44, 4444)

D. (8, 88, 8888)

Answer: B



Watch Video Solution

391. In the following question, select the odd number-pair from the given alternatives :

A. (a) $7 - 49$

B. (b) $2 - 4$

C. (c) $5 - 25$

D. (d) $3 - 39$

Answer: D



Watch Video Solution

392. In the following question, select the odd number-pair from the given alternatives :

A. (a) (61, 64, 71)

B. (b) (57, 60, 69)

C. (c) (75, 78, 85)

D. (d) (89, 92, 99)

Answer: B



Watch Video Solution

TYPE-III

1. In each of the following questions, select the one which is different from other three alternatives. ABZY, BCYX, CDVW, DEVU

A. ABZY

B. BCYX

C. CDVW

D. DEVU

Answer: C



Watch Video Solution

2. In each of the following questions, select the one which is different from other three alternatives. AYBZ, BXCY, DVEW, MPON

A. AYBZ

B. BXCY

C. DVEW

D. MPON

Answer: D



Watch Video Solution

3. In each of the following questions, select the one which is different from other three alternatives.

A. IJCD

B. WYTS

C. QRKL

D. POMN

Answer: B



Watch Video Solution

4. In each of the following questions, select the one which is different from other three alternatives.

A. AEFJ

B. KOPT

C. UYZD

D. EHIL

Answer: D



Watch Video Solution

5. In each of the following questions, select the one which is different from other three alternatives.

A. (a) DINS

B. (b) CHNR

C. (c) BGLQ

D. (d) AFKP

Answer: B



Watch Video Solution

6. In each of the following questions, select the one which is different from other three alternatives.

A. (a) ACE

B. (b) FHJ

C. (c) KLM

D. (d) SUW

Answer: C



[Watch Video Solution](#)

7. In each of the following questions, select the one which is different from other three alternatives.

A. AJKL

B. IBCD

C. OROP

D. UFGH

Answer: C



Watch Video Solution

8. Select the one which is different from other three alternatives.

A. DEB

B. RTP

C. HIF

D. NOL

Answer: B



9. In the following question, select the one which is different from other three alternatives.

A. RGTF

B. MLOK

C. CTES

D. VDZC

Answer: D





10. In the following question, select the one which is different from other three alternatives.

A. UZDGI

B. JOSVX

C. RWACE

D. FKORT

Answer: C



Watch Video Solution

11. In the following question, select the one which is different from other three alternatives.

A. CEFG

B. DFGH

C. GIKJ

D. ABCD

Answer: D



Watch Video Solution

12. In each of the following questions, select the one which is different from other three alternatives.

A. (a) OQTX

B. (b) IMNQ

C. (c) EGJN

D. (d) XZCG

Answer: B



Watch Video Solution

13. Select the one which is different from other three alternatives.

A. BFJQ

B. RUZG

C. GJOV

D. ILQX

Answer: A



14. In each of the following questions, select the one which is different from other three alternatives.

A. AEGC

B. HLNJ

C. OSVO

D. VZBX

Answer: C





15. In each of the following questions, select the one which is different from other three alternatives.

A. ywus

B. zxyv

C. gecA

D. BZXV

Answer: B



[Watch Video Solution](#)

16. In each of the following questions, select the one which is different from other three alternatives.

A. MKGA

B. RPLF

C. VTPJ

D. PNID

Answer: D



Watch Video Solution

17. In each of the following questions, select the one which is different from other three alternatives.

A. XZUS

B. OQLJ

C. HJFE

D. FHCA

Answer: C



Watch Video Solution

18. In each of the following questions, select the one which is different from other three alternatives.

A. (a) KNPS

B. (b) RUWZ

C. (c) MPRU

D. (d) PRSU

Answer: D



[Watch Video Solution](#)

19. In each of the following questions, select the one which is different from other three alternatives.

A. BFJQ

B. RUZG

C. GJOV

D. ILQX

Answer: A



[Watch Video Solution](#)

20. In each of the following questions, select the one which is different from other three alternatives.

A. GECA

B. PNLJ

C. VUSQ

D. TRPN

Answer: C



Watch Video Solution

21. Select the one which is different from other three alternatives.

A. A N B P

B. C P D Q

C. F S G T

D. I V J W

Answer: A



22. Select the one which is different from other three alternatives.

A. J M P S

B. M P S L

C. D G J M

D. U X A D

Answer: B



23. In each of the following questions, select the one which is different from other three alternatives.

A. ACXZ

B. PRUW

C. FHSU

D. ACXY

Answer: D



Watch Video Solution

24. In each of the following questions, select the one which is different from other three alternatives.

A. AEIO

B. BFJN

C. CGKO

D. DHLP

Answer: A



25. In each of the following questions, select the one which is different from other three alternatives.

A. (a) AYBZ

B. (b) BXCY

C. (c) DVEW

D. (d) MPON

Answer: D





[Watch Video Solution](#)

26. In each of the following questions, select the one which is different from other three alternatives.

A. ACDF

B. TUOP

C. HIVW

D. FGKL

Answer: A



[Watch Video Solution](#)

27. In each of the following questions, select the one which is different from other three alternatives.

A. DCFG

B. FEHI

C. HGIK

D. JILM

Answer: C



[Watch Video Solution](#)

28. In each of the following questions, select the one which is different from other three alternatives.

A. (a) ZVRN

B. (b) UQMJ

C. (c) SOKG

D. (d) TPLH

Answer: B



[Watch Video Solution](#)

29. In each of the following questions, select the one which is different from other three alternatives.

A. PRSQ

B. UWXV

C. LONM

D. CEFD

Answer: C



[Watch Video Solution](#)

30. In each of the following questions, select the one which is different from other three alternatives.

A. (a) YXVU

B. (b) ORQP

C. (c) KJHG

D. (d) MLJI

Answer: B



Watch Video Solution

31. Select the one which is different from other three alternatives.

A. CRDS

B. APBQ

C. BUFB

D. GWHX

Answer: A



32. Select the one which is different from other three alternatives.

A. EDHG

B. LKON

C. UVWX

D. QPTS

Answer: C



33. In each of the following questions, select the one which is different from other three alternatives.

A. QOOM

B. WUUS

C. JIIF

D. VTTR

Answer: D



Watch Video Solution

34. In each of the following questions, select the one which is different from other three alternatives.

A. (a) HDFI

B. (b) NJLO

C. (c) SOQT

D. (d) WSXZ

Answer: D





[Watch Video Solution](#)

35. Select the one which is different from other three alternatives.

A. ZXVT

B. USQO

C. DEFG

D. PNLJ

Answer: C



[Watch Video Solution](#)

36. In each of the following questions, select the one which is different from other three alternatives.

A. AFCG

B. DIGL

C. INLQ

D. OTRW

Answer: A



Watch Video Solution

37. In each of the following questions, select the one which is different from other three alternatives.

A. BYCX

B. CXDW

C. AZYB

D. DWEV

Answer: C



38. In each of the following questions, select the one which is different from other three alternatives.

A. ZACEG

B. OQSUW

C. VXZBD

D. HJLNP

Answer: A



Watch Video Solution

39. In the following question, select the one which is different from other three alternatives.

A. MNXY

B. ABPQ

C. RSTU

D. EFMN

Answer: A



Watch Video Solution

40. In each of the following questions, select the one which is different from other three alternatives.

A. ADGJ

B. NQTV

C. PSVX

D. CFIK

Answer: A



Watch Video Solution

41. In each of the following questions, select the one which is different from other three alternatives.

A. (a) ZXVT

B. (b) YWUS

C. (c) PNLJ

D. (d) IHGF

Answer: D



[Watch Video Solution](#)

42. In each of the following questions, select the one which is different from other three alternatives.

A. (a) ACDF

B. (b) TUOP

C. (c) HIVW

D. (d) FGKL

Answer: A



Watch Video Solution

43. In each of the following questions, select the one which is different from other three alternatives.

A. deba

B. hgfa

C. pqrs

D. rqpo

Answer: C



[Watch Video Solution](#)

44. In each of the following questions, select the one which is different from other three alternatives.

A. (a) BFJN

B. (b) DHLP

C. (c) GIMQ

D. (d) HLPT

Answer: C



Watch Video Solution

45. In each of the following questions, select the one which is different from other three alternatives.

A. X

B. Y

C. H

D. D

Answer: B



[Watch Video Solution](#)

46. In each of the following questions, select the one which is different from other three alternatives.

A. (a) ZKXJ

B. (b) CMAL

C. (c) TGRF

D. (d) FRTK

Answer: D



[Watch Video Solution](#)

47. In each of the following questions, select the one which is different from other three alternatives.

A. ABJNM

B. QRTUZ

C. IXYOQ

D. WFGOP

Answer: C



Watch Video Solution

48. In each of the following questions, select the one which is different from other three alternatives.

A. (a) A

B. (b) I

C. (c) D

D. (d) E

Answer: C



Watch Video Solution

49. Select the one which is different from other three alternatives.

A. RNMP

B. JFEH

C. RPOQ

D. HDCF

Answer: C



50. In each of the following questions, select the one which is different from other three alternatives.

A. (a) AbcdE

B. (b) IfghO

C. (c) ApqrL

D. (d) UlmnE

Answer: C





51. In each of the following questions, select the one which is different from other three alternatives.

A. DI

B. KQ

C. OU

D. AG

Answer: A



Watch Video Solution

52. In each of the following questions, select the one which is different from other three alternatives.

A. EPH

B. FQI

C. HSK

D. KWO

Answer: D



[Watch Video Solution](#)

53. In each of the following questions, select the one which is different from other three alternatives.

A. BDGK

B. PRUY

C. FGJK

D. KMPT

Answer: C



[Watch Video Solution](#)

54. In each of the following questions, select the one which is different from other three alternatives.

A. MSWCH

B. NSWAH

C. GMRVY

D. UZEIL

Answer: C



Watch Video Solution

55. In each of the following questions, select the one which is different from other three alternatives.

A. BADC

B. JILK

C. NMPO

D. VUWX

Answer: D



[Watch Video Solution](#)

56. In each of the following questions, select the one which is different from other three alternatives.

A. (a) EGKQ

B. (b) CEIO

C. (c) LNQW

D. (d) PRVB

Answer: C



Watch Video Solution

57. In each of the following questions, select the one which is different from other three alternatives.

A. (a) PQSU

B. (b) BCQN

C. (c) ABDF

D. (d) MNPR

Answer: B



Watch Video Solution

58. Select the one which is different from other three alternatives.

A. ABYZ

B. CDWX

C. EFUV

D. CHTV

Answer: D



59. Select the one which is different from other three alternatives.

A. PRSU

B. SUWY

C. HJLN

D. CEGJ

Answer: A



60. In each of the following questions, select the one which is different from other three alternatives.

A. (a) YDWB

B. (b) TKRI

C. (c) QNOM

D. (d) HLFJ

Answer: C



Watch Video Solution

61. In case of the following questions, select the one which is different from other three alternatives. (1) JKOP (2) MNST (3) CABD (4) OPWX

A. JKOP

B. MNST

C. CABD

D. OPWX

Answer: C



Watch Video Solution

62. In case of the following questions, select the one which is different from other three alternatives. (1) CAFD (2) TSWV (3) IGLJ (4) OMRP

A. CAFD

B. TSWV

C. IGLJ

D. OMRP

Answer: A



Watch Video Solution

63. In each of the following questions, select the one which is different from other three alternatives. DWHS, DYDW, CXFU, EVJQ

A. DWHS

B. DYDW

C. CXFU

D. EVJQ

Answer: C



Watch Video Solution

64. In each of the following questions, select the one which is different from other three alternatives.

A. DHLP

B. TXBF

C. JNRV

D. YBEH

Answer: D



Watch Video Solution

65. In each of the following questions, select the one which is different from other three alternatives.

A. (a) DFIMR

B. (b) CEHLQ

C. (c) GILPU

D. (d) HJMPT

Answer: D



Watch Video Solution

66. In each of the following questions, select the one which is different from other three alternatives.

A. F

B. H

C. V

D. N

Answer: C



Watch Video Solution

67. In each of the following questions, select the one which is different from other three alternatives.

A. DEVW

B. GHFG

C. JKNO

D. CBED

Answer: D



Watch Video Solution

68. In each of the following questions, select the one which is different from other three alternatives.

A. VWXY

B. CEGI

C. KMOQ

D. RTVX

Answer: A



Watch Video Solution

69. In each of the following questions, select the one which is different from other three alternatives.

A. N

B. Z

C. H

D. T

Answer: D



Watch Video Solution

70. In each of the following questions, select the one which is different from other three alternatives.

A. ETGV

B. QHSJ

C. ISHR

D. CVEX

Answer: C



Watch Video Solution

71. In each of the following questions, select the one which is different from other three alternatives.

A. XVTR

B. KNQR

C. IGEC

D. NLJH

Answer: B



Watch Video Solution

72. In the following question, select the one which is different from other three alternatives.

A. PQO

B. VWU

C. AZY

D. TUS

Answer: C



Watch Video Solution

73. In each of the following questions, select the one which is different from other three alternatives.

A. YWU

B. PRT

C. DFH

D. IKM

Answer: A



Watch Video Solution

74. In each of the following questions, select the one which is different from other three alternatives.

A. TSRQ

B. PONM

C. DCBA

D. MRVX

Answer: D



Watch Video Solution

75. In each of the following questions, select the one which is different from other three alternatives.

A. BCD

B. QRS

C. KMN

D. WXY

Answer: C



Watch Video Solution

76. In each of the following questions, select the one which is different from other three alternatives. ACEG, RTVX, JLNP, BDFG

A. ACEG

B. RTVX

C. JLNP

D. BDFG

Answer: D



Watch Video Solution

77. In each of the following questions, select the one which is different from other three alternatives. BCE, KLN, OPQ, WXZ

A. BCE

B. KLN

C. OPQ

D. WXZ

Answer: C



Watch Video Solution

78. In each of the following questions, select the one which is different from other three alternatives.

A. 1 DAEH

B. 2 KIMP

C. 3 HEIL

D. 4 FCGJ

Answer: B



Watch Video Solution

79. In each of the following questions, select the one which is different from other three alternatives.

A. 1 HGDC

B. 2 XETS

C. 3 BAZY

D. 4 POLK

Answer: C



Watch Video Solution

80. In each of the following questions, select the one which is different from other three alternatives.

A. 1 ARES

B. 2 ILUM

C. 3 ANPO

D. 4 UCOD

Answer: C



Watch Video Solution

81. In each of the following questions, select the one which is different from other three alternatives. OCKN, WRID, NPOS, ORNK

A. OCKN

B. WRID

C. NPOS

D. ORNK

Answer: B



Watch Video Solution

82. In each of the following questions, select the one which is different from other three alternatives. FGBC, IJOP, ACEG, LMHI

A. FGBC

B. IJOP

C. ACEG

D. LMHI

Answer: C



Watch Video Solution

83. In each of the following questions, select the one which is different from other three alternatives.

A. ADIL

B. ILPT

C. QSTX

D. FIMQ

Answer: C



Watch Video Solution

84. In each of the following questions, select the one which is different from other three alternatives.

A. (a) AZAA

B. (b) BZBB

C. (c) CXCC

D. (d) DWDD

Answer: B



Watch Video Solution

85. In each of the following questions, select the one which is different from other three alternatives.

A. (a) AKWE

B. (b) PNT0

C. (c) LCUF

D. (d) JHMX

Answer: D



Watch Video Solution

86. In each of the following questions, select the one which is different from other three alternatives.

A. (a) BCIK

B. (b) KLRT

C. (c) VWCE

D. (d) RPWY

Answer: D



Watch Video Solution

87. In each of the following questions, select the one which is different from other three alternatives.

A. NEXFL

B. LANCP

C. FRGSP

D. zgpkv

Answer: C



Watch Video Solution

88. In each of the following questions, select the one which is different from other three alternatives.

A. (a) cfed

B. (b) ilkj

C. (c) FGHI

D. (d) SVUT

Answer: C



Watch Video Solution

89. In each of the following questions, select the one which is different from other three alternatives.

A. (a) ADHM

B. (b) JNRX

C. (c) EINT

D. (d) FJOU

Answer: B



Watch Video Solution

90. In each of the following questions, select the one which is different from other three alternatives.

A. (a) CHM

B. (b) FKP

C. (c) EIN

D. (d) NSX

Answer: C



Watch Video Solution

91. In each of the following questions, select the one which is different from other three alternatives.

A. (a) DFGH

B. (b) KMNO

C. (c) ABCD

D. (d) RTUV

Answer: C



Watch Video Solution

92. In each of the following questions, select the one which is different from other three alternatives.

A. EGJK

B. PQST

C. IKMN

D. MOWX

Answer: B



Watch Video Solution

93. In each of the following questions, select the one which is different from other three alternatives.

A. (a) MXLN

B. (b) FXLH

C. (c) RXLS

D. (d) DXLE

Answer: B



Watch Video Solution

94. In each of the following questions, select the one which is different from other three alternatives.

A. BCDF

B. AEIO

C. GHTK

D. RNWX

Answer: B



Watch Video Solution

95. In each of the following questions, select the one which is different from other three alternatives.

A. (a) BDGI

B. (b) EGJL

C. (c) CHEJ

D. (d) DFIk

Answer: D



Watch Video Solution

96. In each of the following questions, select the one which is different from other three alternatives.

A. EAZSK

B. UKLNG

C. HNLIV

D. TGQMH

Answer: D



Watch Video Solution

97. In each of the following questions, select the one which is different from other three alternatives.

A. (a) ZYWV

B. (b) UTSR

C. (c) QPON

D. (d) MLKJ

Answer: A



Watch Video Solution

98. In each of the following questions, select the one which is different from other three alternatives.

A. T W J P K E

B. U S P M I D

C. Q O L H D A

D. W U R N I E

Answer: A



Watch Video Solution

99. In the following question, select the one which is different from other three alternatives.

A. SFPK

B. TVLH

C. MFPC

D. BMFN

Answer: C



Watch Video Solution

100. In each of the following questions, select the one which is different from other three alternatives.

A. (a) BDFH

B. (b) ACEG

C. (c) IKMO

D. (d) RTVW

Answer: D



Watch Video Solution

101. In each of the following questions, select the one which is different from other three alternatives.

A. (a) 26 Z

B. (b) 24 X

C. (c) 22 V

D. (d) 20 S

Answer: D



Watch Video Solution

102. In each of the following questions, select the one which is different from other three alternatives.

A. (a) EPH

B. (b) FQI

C. (c) HSK

D. (d) KWO

Answer: D



Watch Video Solution

103. In each of the following questions, select the one which is different from other three alternatives.

A. (a) BCUV

B. (b) WXRS

C. (c) MNTU

D. (d) JLGI

Answer: D



Watch Video Solution

104. In each of the following questions, select the one which is different from other three alternatives.

A. BCDBA

B. OMNLK

C. WUVTS

D. SRTQP

Answer: D



Watch Video Solution

105. In each of the following questions, select the one which is different from other three alternatives.

A. (a) ZXVT

B. (b) RPNL

C. (c) OMKI

D. (d) HFDC

Answer: D



Watch Video Solution

106. In each of the following questions, select the one which is different from other three alternatives.

A. MONJK

B. ACAZV

C. GMRGS

D. METEI

Answer: A



Watch Video Solution

107. In each of the following questions, select the one which is different from other three alternatives.

A. (a) XV

B. (b) ZW

C. (c) YV

D. (d) WT

Answer: A



Watch Video Solution

108. In each of the following questions, select the one which is different from other three alternatives.

A. (a) ADF

B. (c) BEG

C. (c) LOQ

D. (d) SUW

Answer: D



Watch Video Solution

109. In each of the following questions, select the one which is different from other three alternatives.

A. (a) HIXW

B. (b) BAQP

C. (c) SRVU

D. (d) UTYX

Answer: A



Watch Video Solution

110. In each of the following questions, select the one which is different from other three alternatives.

A. (a) E D H G

B. (b) L K O N

C. (c) U V W X

D. (d) Q P T S

Answer: C



Watch Video Solution

111. In each of the following questions, select the one which is different from other three alternatives.

A. (a) C X D W

B. (b) G T H S

C. (c) J Q K P

D. (d) H R I S

Answer: D



Watch Video Solution

112. In each of the following questions, select the one which is different from other three alternatives.

A. (a) BGNI

B. (b) CHOJ

C. (c) DIPL

D. (d) EJQL

Answer: C



Watch Video Solution

113. In each of the following questions, select the one which is different from other three alternatives.

A. (a) MKO

B. (b) QSO

C. (c) VTX

D. (d) DBF

Answer: B



Watch Video Solution

114. In each of the following questions, select the one which is different from other three alternatives.

A. XRMKL

B. XRMIF

C. XRN LJ

D. XSN LJ

Answer: B



Watch Video Solution

115. In each of the following questions, select the one which is different from other three alternatives.

A. (a) ccdfgg

B. (b) hhikll

C. (c) mmnopp

D. (d) qqrtuu

Answer: C



Watch Video Solution

116. In each of the following questions, select the one which is different from other three alternatives.

A. (a) MLNO

B. (b) KJPQ

C. (c) IHRS

D. (d) GFTV

Answer: D



Watch Video Solution

117. In each of the following questions, select the one which is different from other three alternatives.

A. B E H L N

B. E J L S Z

C. D K Q V Z

D. A C I K T

Answer: C



Watch Video Solution

118. In each of the following questions, select the one which is different from other three alternatives.

A. BDH

B. CFL

C. EJU

D. DHP

Answer: C



Watch Video Solution

119. In each of the following questions, select the one which is different from other three alternatives.

A. CBCD

B. IHJ

C. ONOP

D. UTUW

Answer: D



Watch Video Solution

120. In each of the following questions, select the one which is different from other three alternatives.

A. ADGPT

B. ACEEIK

C. ABDEI

D. ADIPY

Answer: D



Watch Video Solution

121. In case of the following questions, select the one which is different from other three alternatives. (1) PQ (2) AU (3) CD (4) RS

A. PQ

B. AU

C. CD

D. RS

Answer: B



Watch Video Solution

122. In case of the following questions, select the one which is different from other three alternatives. (1) CPBO (2) BODQ (3) ANHU (4) ESGT

A. CPBO

B. BODQ

C. ANHU

D. ESGT

Answer: D



Watch Video Solution

123. In case of the following questions, select the one which is different from other three alternatives. (1) BFJNRV (2) CGKOSW (3) DHLPTX (4) EIMPSW

A. BFJNRV

B. CGKOSW

C. DHLPTX

D. EIMPSW

Answer: D



Watch Video Solution

124. In case of the following questions, select the one which is different from other three alternatives. 1. KJML 2. GFIH 3. TSVU 4. ZABY

A. KJML

B. GFH

C. TSVU

D. ZABY

Answer: D



Watch Video Solution

125. In each of the following questions, select the one which is different from other three alternatives.

A. (a) ACB

B. (b) GIH

C. (c) MON

D. (d) PQR

Answer: D



Watch Video Solution

126. In each of the following questions, select the one which is different from other three alternatives.

A. BYCX

B. EVFU

C. GTHS

D. LOIR

Answer: D



Watch Video Solution

127. In each of the following questions, select the one which is different from other three alternatives.

A. (a) A

B. (b) O

C. (c) I

D. (d) N

Answer: D



Watch Video Solution

128. In each of the following questions, select the one which is different from other three alternatives.

A. (a) MNP

B. (b) PQS

C. (c) WXZ

D. (d) GHK

Answer: D



Watch Video Solution

129. In each of the following questions, select the one which is different from other three alternatives.

A. DABC

B. PMNO

C. ZWXY

D. IDEF

Answer: D



Watch Video Solution

130. In the following questions, select the one which is different from other three alternatives.

A. M

B. N

C. O

D. P

Answer: C



Watch Video Solution

131. In case of the following questions, select the one which is different from other three alternatives. (1) GLOV (2) CFKR (3) ILQX (4)ADIP

A. GLOV

B. CFKR

C. ILQX

D. ADIP

Answer: A



Watch Video Solution

132. In each of the following questions, select the one which is different from other three alternatives.

A. GOD

B. RAT

C. WAR

D. PAPER

Answer: D



Watch Video Solution

133. In case of the following questions, select the one which is different from other three alternatives. (1) DE (2) EF (3) FI (4) GH

A. D

B. E

C. F

D. G

Answer: B



Watch Video Solution

134. In each of the following questions, select the one which is different from other three alternatives.

A. (a) DGLS

B. (b) MPSV

C. (c) HKPW

D. (d) KNSZ

Answer: B



Watch Video Solution

135. In each of the following questions, select the one which is different from other three alternatives.

A. (a) ROPE

B. (b) WED

C. (c) DON

D. (d) POT

Answer: A



Watch Video Solution

136. In each of the following questions, select the one which is different from other three alternatives.

A. U

B. V

C. W

D. X

Answer: A



Watch Video Solution

137. In each of the following questions, select the one which is different from other three alternatives.

A. (a) BEH

B. (b) CFI

C. (c) DGJ

D. (d) EHL

Answer: D



Watch Video Solution

138. In each of the following questions, select the one which is different from other three alternatives. HIVW, MKLN, EFOP, CDYZ

A. HIVW

B. MKLN

C. EFOP

D. CDYZ

Answer: B



Watch Video Solution

139. In case of the following questions, select the one which is different from other three

alternatives. 1. *ABDG* 2. *CDFI* 3. *EFHK*
4. *GHJK*

A. A B D G

B. C D F I

C. E F H K

D. G H J K

Answer: D



Watch Video Solution

140. In each of the following questions, select the one which is different from other three alternatives.

A. (a) NML

B. (b) OPQ

C. (c) XWV

D. (d) HGF

Answer: D



Watch Video Solution

141. In each of the following questions, select the one which is different from other three alternatives.

A. E

B. I

C. O

D. V

Answer: D



Watch Video Solution

142.

In each of the following questions, select the one which is different from other three alternatives.

A. M

B. N

C. P

D. O

Answer: C



Watch Video Solution

143. In each of the following questions, select the one which is different from other three alternatives.

A. CFH

B. LOQ

C. XAC

D. KMO

Answer: D



144. In each of the following questions, select the one which is different from other three alternatives.

A. PCAQ

B. LKIN

C. XGEZ

D. DWUF

Answer: A



Watch Video Solution

145. In each of the following questions, select the one which is different from other three alternatives.

A. CDFE

B. JKLM

C. STVU

D. WXZY

Answer: B



Watch Video Solution

146. In each of the following questions, select the one which is different from other three alternatives.

A. BEG

B. KNP

C. WZB

D. JLN

Answer: D



Watch Video Solution

147. In each of the following questions, select the one which is different from other three alternatives.

A. I

B. J

C. K

D. L

Answer: A



[Watch Video Solution](#)

148. In each of the following questions, select the one which is different from other three alternatives.

A. (a) DCB

B. (b) NML

C. (c) PQS

D. (d) TSR

Answer: C



[Watch Video Solution](#)

149. In each of the following questions, select the one which is different from other three alternatives.

A. ACE

B. GIK

C. JLM

D. SUW

Answer: C



Watch Video Solution

150. In each of the following questions, select the one which is different from other three alternatives.

A. (a) JKL

B. (b) FGI

C. (c) MPR

D. (d) TUW

Answer: A



Watch Video Solution

151. In each of the following questions, select the one which is different from other three alternatives.

A. (a) URT

B. (b) GDF

C. (c) PLN

D. (d) NKM

Answer: C



[Watch Video Solution](#)

152. In each of the following questions, select the one which is different from other three alternatives.

A. NML

B. QPO

C. HE

D. XWY

Answer: C



[Watch Video Solution](#)

153. In each of the following questions, select the one which is different from other three alternatives.

A. ABBC

B. HIIJ

C. PQQR

D. WYYZ

Answer: D



[Watch Video Solution](#)

154. In each of the following questions, select the one which is different from other three alternatives.

A. MDPS

B. CNGH

C. FJLQ

D. OAUE

Answer: D



[Watch Video Solution](#)

155. In each of the following questions, select the one which is different from other three alternatives.

A. EBD

B. IFH

C. QNO

D. YVX

Answer: C



[Watch Video Solution](#)

156. In each of the following questions, select the one which is different from other three alternatives.

A. BQCR

B. DSET

C. FUGV

D. HWIY

Answer: D



[Watch Video Solution](#)

157. In each of the following questions, select the one which is different from other three alternatives. AEIU, BCDF, AOIU, OIAE

A. AEIU

B. BCDF

C. AOIU

D. OIAE

Answer: B



Watch Video Solution

158.

In each of the following questions, select the one which is different from other three alternatives.

A. CFJ

B. DGK

C. EHL

D. STUV

Answer: D



Watch Video Solution

159. In each of the following questions, select the one which is different from other three alternatives.

A. (a) ABDE

B. (b) MNPQ

C. (c) EFHI

D. (d) STUV

Answer: D



Watch Video Solution

160. In each of the following questions, select the one which is different from other three alternatives.

A. NLM

B. YXZ

C. NMO

D. PQS

Answer: A



Watch Video Solution

161. In each of the following questions, select the one which is different from other three alternatives.

A. LRO

B. CJG

C. SZW

D. PWT

Answer: A



Watch Video Solution

162. In each of the following questions, select the one which is different from other three alternatives.

A. MTF

B. SLE

C. RKD

D. UNG

Answer: A



Watch Video Solution

163. In each of the following questions, select the one which is different from other three alternatives.

A. CENT

B. JLOS

C. MORV

D. CEHL

Answer: A



Watch Video Solution

164. In each of the following questions, select the one which is different from other three alternatives.

A. ZYX

B. FED

C. NML

D. GHI

Answer: D



Watch Video Solution

165. In each of the following questions, select the one which is different from other three alternatives.

A. (a) XZY

B. (b) MON

C. (c) PRQ

D. (d) EAC

Answer: D



Watch Video Solution

166. In each of the following questions, select the one which is different from other three alternatives.

A. BADC

B. XWZY

C. VUST

D. NMPO

Answer: C



Watch Video Solution

167. In case of the following questions, select the one which is different from other three alternatives.

A. DCFG

B. FEHI

C. JILM

D. HGJL

Answer: D



Watch Video Solution

168. In case of the following questions, select the one which is different from other three alternatives.

A. XWVU

B. SRQP

C. NMLK

D. EDCA

Answer: D



Watch Video Solution

169. In case of the following questions, select the one which is different from other three alternatives.

A. QWBS

B. MPTD

C. UIAE

D. RVGW

Answer: C



Watch Video Solution

170. In each of the following questions, select the one which is different from other three alternatives.

A. Man = 13114

B. Ram = 18113

C. Jug = 10217

D. Hub = 82110

Answer: D



Watch Video Solution

171. In each of the following questions, select the one which is different from other three alternatives.

A. FhjL

B. PrtV

C. KnpR

D. Cegl

Answer: C



Watch Video Solution

172. In case of the following questions, select the one which is different from other three alternatives.

A. BD

B. GI

C. PN

D. WY

Answer: C



Watch Video Solution

173. In case of the following questions, select the one which is different from other three alternatives.

A. ZX

B. TR

C. IF

D. OM

Answer: C



Watch Video Solution

174. In case of the following questions, select the one which is different from other three alternatives.

A. DW

B. JQ

C. HT

D. FU

Answer: C



Watch Video Solution

175. In each of the following questions, select the one which is different from other three alternatives.

A. (a) ADGJ

B. (b) MPSV

C. (c) EHJN

D. (d) LORU

Answer: C



Watch Video Solution

176. In case of the following questions, select the one which is different from other three alternatives.

A. dcba

B. zywx

C. srpq

D. hgfe

Answer: C



Watch Video Solution

177. In case of the following questions, select the one which is different from other three alternatives.

A. FIJL

B. RUVX

C. BGHJ

D. MPQS

Answer: D



Watch Video Solution

178. In case of the following questions, select the one which is different from other three alternatives.

A. WXYZ

B. PRSQ

C. ABCD

D. EFGH

Answer: B



Watch Video Solution

179. In each of the following questions, select the one which is different from other three alternatives.

A. I

B. N

C. W

D. H

Answer: A



Watch Video Solution

180. In each of the following questions, select the one which is different from other three alternatives.

A. (a) TPDC

B. (b) BKDF

C. (c) OLTF

D. (d) BJLQ

Answer: C



Watch Video Solution

181. In each of the following questions, select the one which is different from other three alternatives.

A. I

B. E

C. B

D. O

Answer: C



Watch Video Solution

182. In each of the following questions, select the one which is different from other three alternatives.

A. FIK

B. DGI

C. MPR

D. KND

Answer: D



Watch Video Solution

183. In each of the following questions, select the one which is different from other three alternatives.

A. (a) MIGE

B. (b) XTQO

C. (c) RNKI

D. (d) HDAY

Answer: A



Watch Video Solution

184. In case of the following questions, select the one which is different from other three alternatives.

A. HCBG

B. LPOK

C. FMEL

D. RJIQ

Answer: A



Watch Video Solution

185. In each of the following questions, select the one which is different from other three alternatives.

A. AZBY

B. CXDW

C. EVFU

D. TGSH

Answer: D



Watch Video Solution

186. In each of the following questions, select the one which is different from other three alternatives.

A. LNOR

B. TRPS

C. CEFI

D. GIJM

Answer: B



Watch Video Solution

187. In each of the following questions, select the one which is different from other three alternatives.

A. DEFY

B. NINT

C. MOST

D. SUVY

Answer: D



Watch Video Solution

188. In each of the following questions, select the one which is different from other three alternatives.

A. JLOS

B. GHIM

C. HJMQ

D. PRUY

Answer: B



Watch Video Solution

189.

In each of the following questions, select the one which is different from other three alternatives.

A. BGIE

B. AGHB

C. DJKE

D. AGJD

Answer: B



Watch Video Solution

190. In each of the following questions, select the one which is different from other three alternatives.

A. SSA

B. RMSA

C. RUSA

D. NASA

Answer: C



Watch Video Solution

191. In each of the following questions, select the one which is different from other three alternatives.

A. (a) D

B. (b) G

C. (c) H

D. (d) J

Answer: B



Watch Video Solution

192. In each of the following questions, select the one which is different from other three alternatives.

A. SRT

B. PON

C. KJL

D. VUW

Answer: B



Watch Video Solution

193. In each of the following questions, select the one which is different from other three alternatives.

A. (a) EVFU

B. (b) CXDW

C. (c) AZBX

D. (d) GTHS

Answer: C



Watch Video Solution

194. In each of the following questions, select the one which is different from other three alternatives.

A. (a) B C D G

B. (b) G I J L

C. (c) P R S U

D. (d) U W X Z

Answer: A



Watch Video Solution

195. In each of the following questions, select the one which is different from other three alternatives.

A. M K H B D

B. G F K H C

C. B D F A T

D. X V R P I

Answer: D



Watch Video Solution

196. In each of the following questions, select the one which is different from other three

alternatives. D C E B, P N Q S T, V K H G M, W P
Z L H

A. D C E B

B. P N Q S T

C. V K H G M

D. W P Z L H

Answer: A



Watch Video Solution

197. In case of the following questions, select the one which is different from other three alternatives.

A. STU

B. MLN

C. QRS

D. XYZ

Answer: B



Watch Video Solution

198. In case of the following questions, select the one which is different from other three alternatives.

A. NOTA

B. NATO

C. NASA

D. NAM

Answer: A



Watch Video Solution

199. In each of the following questions, select the one which is different from other three alternatives.

A. GHI

B. PRS

C. UVW

D. ABC

Answer: B



Watch Video Solution

200. In each of the following question find the odd letters from the given alternatives. FEDC, STUV, LKJI, PQRO

A. FEDC

B. STUV

C. LKJI

D. PQRO

Answer: B



Watch Video Solution

201. In each of the following question find the odd letters from the given alternatives.

A. LPXOY

B. PQST

C. FBDLX

D. MPONL

Answer: B



Watch Video Solution

202. In each of the following question find the odd letters from the given alternatives. A B U E

A. A

B. B

C. U

D. E

Answer: C



Watch Video Solution

203. In each of the following question find the odd letters from the given alternatives.

A. KM

B. DF

C. XZ

D. RU

Answer: D



Watch Video Solution

204. In each of the following question find the odd letters from the given alternatives.

A. OHA

B. PIB

C. JQC

D. RKD

Answer: C



Watch Video Solution

205. In each of the following question find the odd letters from the given alternatives.

A. DHF

B. KOM

C. RVT

D. WYX

Answer: D



Watch Video Solution

206. In each of the following question find the odd letters from the given alternatives.

A. (a) BDFH

B. (b) JLNP

C. (c) YOIC

D. (d) RTVX

Answer: C



Watch Video Solution

207. In each of the following question find the odd letters from the given alternatives.

A. a) mmm qq q ttt

B. b) kkk ooo sss

C. c) ccc ggg kkk

D. d) bbb fff iii

Answer: A



Watch Video Solution

208. In each of the following question find the odd letters from the given alternatives.

A. QIEM

B. HIUL

C. TEAP

D. ZOIV

Answer: B



Watch Video Solution

209. In each of the following question find the odd letters from the given alternatives.

A. PIERCE-RECIPE

B. EXPERT -PRETEXT

C. SILENT-LISTEN

D. ESTATE -TEASET

Answer: B



Watch Video Solution

210. In the following question find the odd letters from the given alternatives.

A. GFHJ

B. CBEF

C. EDGH

D. IHKL

Answer: A



Watch Video Solution

211. In each of the following question find the odd letters from the given alternatives.

A. (a) KQNN

B. (b) DWFU

C. (c) EVHS

D. (d) HSKP

Answer: B



Watch Video Solution

212. In each of the following question find the odd letters from the given alternatives.

A. QJ

B. SH

C. LN

D. UF

Answer: C



Watch Video Solution

213. In the following question find the odd letters from the given alternatives.

A. Y U Q M

B. S O K J

C. R N J F

D. T P L H

Answer: C



Watch Video Solution

214. In each of the following question find the odd letters from the given alternatives.

A. A) B S

B. B) E V

C. C) I Z

D. D) D X

Answer: D



Watch Video Solution

215. In each of the following question find the odd letters from the given alternatives.

A. OKHA

B. ERKU

C. ANDI

D. RERU

Answer: D



Watch Video Solution

216. In each of the following question find the odd letters from the given alternatives. NT, WC, JP, GE

A. NT

B. WC

C. JP

D. GE

Answer: D



Watch Video Solution

217. In each of the following question find the odd letters from the given alternatives.

A. IHJ

B. LKM

C. STR

D. ONP

Answer: C



Watch Video Solution

218. In each of the following question find the odd letters from the given alternatives.

A. (a) QRP

B. (b) RUQ

C. (c) NEM

D. (d) MAL

Answer: A



Watch Video Solution

219. In each of the following question find the odd letters from the given alternatives.

A. ACEG

B. HJLN

C. MNOL

D. TVXZ

Answer: C



Watch Video Solution

220. In each of the following question find the odd letters from the given alternatives.

A. (a) QU

B. (b) JG

C. (c) RN

D. (d) NJ

Answer: B



Watch Video Solution

221. In each of the following question find the odd letters from the given alternatives.

A. (a) YVX

B. (b) QNO

C. (c) EBD

D. (d) IFH

Answer: B



Watch Video Solution

222. In each of the following question find the odd letters from the given alternatives. TIW, RFD, CAP, PET

A. TIW

B. RFD

C. CAP

D. PET

Answer: B



Watch Video Solution

223. In each of the following question find the odd letters from the given alternatives. Find out the odd letters.

A. MLKA

B. HGFA

C. STUA

D. RQPA

Answer: C



Watch Video Solution

224. In each of the following question find the odd letters from the given alternatives. Find out the odd letters.

A. IMQU

B. ADGJ

C. WZCF

D. LORU

Answer: A



Watch Video Solution

225. In each of the following question find the odd letters from the given alternatives. DCBA, HGFE, PONM, IJKL

A. DCBA

B. HGFE

C. PONM

D. IJKL

Answer: D



Watch Video Solution

226. In each of the following question find the odd letters from the given alternatives.

A. YXWV

B. FUEV

C. QPSR

D. VUXW

Answer: B



Watch Video Solution

227. In each of the following question find the odd letters from the given alternatives.

A. PQR

B. HGF

C. DCB

D. NPR

Answer: D



Watch Video Solution

228. In each of the following question find the odd letters from the given alternatives.

A. ggijkk

B. aacdff

C. mmopqq

D. qqstuu

Answer: C



Watch Video Solution

229. In the following question find the odd letters from the given alternatives.

A. FB JL

B. DK RW

C. CN PT

D. KN XY

Answer: B



Watch Video Solution

230. In each of the following question find the odd letters from the given alternatives.

A. SU

B. BD

C. IK

D. PN

Answer: D



Watch Video Solution

231. In the following question find the odd letters from the given alternatives.

A. UZeN

B. DkUZ

C. LPuB

D. FoMY

Answer: A



Watch Video Solution

232. In each of the following question find the odd letters from the given alternatives. UVWX, SRQP, LKJI, HGFE

A. UVWX

B. SRQP

C. LKJI

D. HGFE

Answer: A



Watch Video Solution

233. In each of the following question find the odd letters from the given alternatives.

A. (a) ZXVT

B. (b) SQOM

C. (c) WUSP

D. (d) MKIG

Answer: C



Watch Video Solution

234. In each of the following question find the odd letters from the given alternatives.

A. (a) NKM

B. (b) DAC

C. (c) UTV

D. (d) IFH

Answer: C



Watch Video Solution

235. In each of the following question find the odd letters from the given alternatives.

A. CGFJ

B. EIHL

C. FKIN

D. IMNR

Answer: C



Watch Video Solution

236. In each of the following question find the odd letters from the given alternatives.

A. LMVW

B. PQCB

C. HIXY

D. NODE

Answer: D



Watch Video Solution

237. In each of the following question find the odd letters from the given alternatives.

A. BDF

B. RTV

C. XYZ

D. MOQ

Answer: C



Watch Video Solution

238. In each of the following question find the odd letters from the given alternatives.

A. NUOP

B. Q 37Q

C. DEST

D. $KZM\phi$

Answer: B



Watch Video Solution

239. In each of the following question find the odd letters from the given alternatives.

A. VXB

B. FIL

C. PSV

D. DHK

Answer: B



Watch Video Solution

240. In each of the following question find the odd letters from the given alternatives. HGFE, VUTS, HNOP, RQPO

A. HGFE

B. VUTS

C. HNOP

D. RQPO

Answer: C



Watch Video Solution

241. In each of the following question find the odd letters from the given alternatives.

A. (a) BD

B. (b) CD

C. (c) DF

D. (d) AC

Answer: B



Watch Video Solution

242. In each of the following question find the odd letters from the given alternatives.

A. VNHK

B. MONR

C. MQMJ

D. NBJM

Answer: B



Watch Video Solution

243. In each of the following question find the odd letters from the given alternatives.

A. LNP

B. MOQ

C. BDE

D. EGI

Answer: C



Watch Video Solution

244. In each of the following question find the odd letters from the given alternatives. AKWE, PNTQ, LCUF, JHMX

A. AKWE

B. PNTQ

C. LCUF

D. JHMX

Answer: D



Watch Video Solution

245. In each of the following question find the odd letters from the given alternatives.

A. CBUV

B. YXTU

C. PQOP

D. IJSO

Answer: D



Watch Video Solution

246. In each of the following question find the odd letters from the given alternative

A. (a) MLK

B. (b) NPR

C. (c) XWV

D. (d) EDC

Answer: B



Watch Video Solution

247. In each of the following question find the odd letters from the given alternative

ZADE, CEGI, SUWY, MOQS

A. ZADE

B. CEGI

C. SUWY

D. MOQS

Answer: A



Watch Video Solution

248. In each of the following question find the odd letters from the given alternative.

A. (a) DAEH

B. (b) KIMP

C. (c) HEIL

D. (d) FCGJ

Answer: B



Watch Video Solution

249. In each of the following question find the odd letters from the given alternative

Find the odd letters from the given alternatives.

A. OMQ

B. TPR

C. TRV

D. VTX

Answer: B



Watch Video Solution

250. In each of the following question find the odd letters from the given alternative

Select the odd letters from the given alternatives.

A. UVX

B. BCD

C. HIJ

D. PQR

Answer: A



Watch Video Solution

251. In each of the following question find the odd letters from the given alternative

Select the odd letters from the given alternatives.

A. CX

B. EV

C. JR

D. LO

Answer: C



Watch Video Solution

252. In each of the following question find the odd letters from the given alternative.

A. (a) NPLRJ

B. (b) TVRXQ

C. (c) FHDJB

D. (d) WYUAS

Answer: B



Watch Video Solution

253. In each of the following question find the odd letters from the given alternative

BDGK, JLOS, NPSW, MORU

A. BDGK

B. JLOS

C. NPSW

D. MORU

Answer: D



Watch Video Solution

254. In each of the following question find the odd letters from the given alternative

A. CA

B. FD

C. KI

D. TQ

Answer: D



Watch Video Solution

255. In each of the following question find the odd letters pair from the given alternatives.

A. IKMO

B. ACEG

C. FHJL

D. TVWY

Answer: D



Watch Video Solution

256. In each of the following question find the odd letters pair from the given alternatives.

IGEC, AYWV, QOMK, YWUS

A. IGEC

B. AYWV

C. QOMK

D. YWUS

Answer: B



Watch Video Solution

257. In each of the following question find the odd letters pair from the given alternatives.

Select the odd letters from the given alternatives.

A. KMO

B. UZA

C. CEG

D. LNP

Answer: B



Watch Video Solution

258. In each of the following question find the odd letters pair from the given alternatives.

Select the odd letters from the given alternatives.

A. AJDG

B. KTNQ

C. JMSP

D. UDXA

Answer: C



Watch Video Solution

259. In each of the following question find the odd letters pair from the given alternatives.

A. QRTY

B. BCEK

C. FGIO

D. TUWC

Answer: A



Watch Video Solution

260. In each of the following question find the odd letters pair from the given alternatives.

Select the odd letters from the given alternatives.

A. OMNLM

B. TOQOP

C. WUVTU

D. RPQOP

Answer: B



Watch Video Solution

261. In each of the following question find the odd letters pair from the given alternatives.

AG, WA, ET, IQ

A. AG

B. WA

C. ET

D. IQ

Answer: C



Watch Video Solution

262. In each of the following question find the odd letters pair from the given alternatives.

Find the odd letters from the given alternatives.

A. CTES

B. VDZC

C. MKOJ

D. RGTF

Answer: B



Watch Video Solution

263. In each of the following question find the odd letters pair from the given alternatives.

Find the odd letters from the given alternatives.

A. A) AEIM

B. B) BFJN

C. C) CGKO

D. D) FDKN

Answer: D



Watch Video Solution

264. In each of the following question find the odd letters pair from the given alternatives.

Find the odd letters from the given alternatives.

A. A) ACEG

B. B) BDFG

C. C) JLNP

D. D) SUWY

Answer: B



Watch Video Solution

265. In each of the following question find the odd letters pair from the given alternatives.

NSWX, KPSU, HMQR, EJNO

A. NSWX

B. KPSU

C. HMQR

D. EJNO

Answer: B



Watch Video Solution

266. In each of the following question find the odd letters pair from the given alternatives.

Find the odd letters from the given alternatives.

A. AOU

B. EOI

C. UIE

D. ALO

Answer: D



Watch Video Solution

267. In each of the following question find the odd letters pair from the given alternatives.

Find the odd letters from the given alternatives.

A. A) JKLM

B. B) NOPQ

C. C) RSTU

D. D) VWXZ

Answer: D



Watch Video Solution

268. In each of the following question find the odd letters pair from the given alternatives.

Find the odd letters from the given alternatives.

A. CPA

B. REB

C. QUD

D. AOT

Answer: D



Watch Video Solution

269. In each of the following question find the odd letters pair from the given alternatives.

Find the odd letters from the given alternatives.

A. AEFJ

B. KOPT

C. UYZD

D. EHIL

Answer: D



Watch Video Solution

270. In each of the following question find the odd letters pair from the given alternatives.

Find the odd letters from the given alternatives.

A. EHJ

B. JML

C. PSR

D. VYX

Answer: A



Watch Video Solution

271. In each of the following question find the odd letters pair from the given alternatives.

Find the odd letters from the given alternatives.

A. ECBY

B. FTUX

C. GEDA

D. WUTQ

Answer: B



Watch Video Solution

272. In each of the following question find the odd letters pair from the given alternatives.

Find the odd letters from the given alternatives.

A. ACEG

B. KMNP

C. HJLN

D. TVXZ

Answer: B



Watch Video Solution

273. In each of the following question find the odd letters pair from the given alternatives.

aaDD, egHH, ikLL, qsTT

A. aaDD

B. egHH

C. ikLL

D. qsTT

Answer: D



Watch Video Solution

274. In each of the following question find the odd letters pair from the given alternatives.

Find the odd letters from the given alternatives.

A. 1 M N O M

B. 2 B D C B

C. 3 X Z Y X

D. 4 P R Q P

Answer: A



Watch Video Solution

275. In each of the following question find the odd letters pair from the given alternatives.

Find the odd letters from the given alternatives.

A. 1 WUV

B. 2 DBA

C. 3 NML

D. 4 HGF

Answer: B



Watch Video Solution

276. In each of the following question find the odd letters pair from the given alternatives.

BDFH, ACEG, IKMO, RTVW

A. BDFH

B. ACEG

C. IKMO

D. RTVW

Answer: D



Watch Video Solution

277. In each of the following question find the odd letters pair from the given alternatives.

Find the odd letters from the given alternatives.

A. ACEG

B. IKMO

C. FHJL

D. TUWY

Answer: D



Watch Video Solution

278. In each of the following question find the odd letters pair from the given alternatives.

Find the odd letters from the given alternatives.

A. 1 JF

B. 2 UQ

C. 3 PL

D. 4 XS

Answer: D



Watch Video Solution

279. In each of the following question find the odd letters pair from the given alternatives.

Find the odd letters from the given alternatives.

A. TOP

B. COP

C. MOP

D. JOP

Answer: D



Watch Video Solution

280. In each of the following question find the odd letters pair from the given alternatives.

BDF, NQS, TVX, HJL

A. BDF

B. NQS

C. TVX

D. HJL

Answer: B



Watch Video Solution

281. In each of the following question find the odd letters pair from the given alternatives.

Find the odd letters from the given alternatives.

A. ABD

B. FGI

C. LMO

D. STU

Answer: D



Watch Video Solution

282. In each of the following question find the odd letters pair from the given alternatives.

BDF, GIK, LMO, OQS

A. BDF

B. GIK

C. LMO

D. OQS

Answer: C



Watch Video Solution

283. In each of the following question find the odd letters pair from the given alternatives.

Find the odd letters from the given alternatives.

A. ZVR

B. ZYX

C. QMI

D. IEA

Answer: B



Watch Video Solution

284. In each of the following question find the odd letters pair from the given alternatives.

Find the odd letters from the given alternatives.

A. DEB

B. RTP

C. HIF

D. NOL

Answer: B



Watch Video Solution

285. In each of the following question find the odd letters pair from the given alternatives.

A. (a) BDGK

B. (b) JLOS

C. (c) NPSW

D. (d) MORU

Answer: D



Watch Video Solution

286. In each of the following question find the odd letters pair from the given alternatives.

CZHK, MLAG, XVBU, SEND

A. CZHK

B. MLAG

C. XVBU

D. SEND

Answer: A



Watch Video Solution

287. In each of the following question find the odd letters pair from the given alternatives.

Find the odd letters from the given alternatives.

A. KP

B. MN

C. HR

D. GT

Answer: C



[Watch Video Solution](#)

288. In each of the following question find the odd letters pair from the given alternatives.

BF, LR, MQ, AE

A. BF

B. LR

C. MQ

D. AE

Answer: B



Watch Video Solution

289. In each of the following question find the odd letters pair from the given alternatives.

Find the odd letters from the given alternatives.

A. A) CBED

B. B) JILK

C. C) TSVU

D. D) VZXY

Answer: D



Watch Video Solution

290. In each of the following question find the odd letters pair from the given alternatives.

Find the odd letters from the given alternatives.

A. A) POCG

B. B) KLIZ

C. C) BUDX

D. D) FQMV

Answer: D



Watch Video Solution

291. In each of the following question find the odd letters pair from the given alternatives.

Find the odd letters from the given alternatives.

A. DBZ

B. QOM

C. USQ

D. JLN

Answer: D



Watch Video Solution

292. In each of the following question find the odd letters pair from the given alternatives.

ABBC, PQQR, WYYZ, KLLM

A. ABBC

B. PQQR

C. WYYZ

D. KLLM

Answer: C



Watch Video Solution

293. In each of the following question find the odd letters pair from the given alternatives.

DGI, JMO, PRT, TWY

A. DGI

B. JMO

C. PRT

D. TWY

Answer: C



Watch Video Solution

294. In each of the following question find the odd letters pair from the given alternatives.

Find the odd letters from the given alternatives.

A. FIHG

B. CGEF

C. JMLK

D. VYXW

Answer: B



Watch Video Solution

295. In each of the following question find the odd letters pair from the given alternatives.

Find the odd letters from the given alternatives.

A. BCE

B. WXZ

C. MNP

D. GHK

Answer: D



Watch Video Solution

296. In the following question find the odd letters pair from the given alternatives.

Find the odd letters from the given alternatives.

A. A

B. U

C. T

D. O

Answer: C



Watch Video Solution

297. In the following question find the odd letters pair from the given alternatives.

Find the odd letters from the given alternatives.

A. HP

B. CJ

C. FN

D. RZ

Answer: B



Watch Video Solution

298. In each of the following question find the odd letters pair from the given alternatives.

Find the odd letters from the given alternatives.

A. AE

B. CG

C. JN

D. MO

Answer: D



Watch Video Solution

299. In each of the following question find the odd letters pair from the given alternatives.

Find the odd letters from the given alternatives.

A. PRTV

B. UWYZ

C. ACEG

D. BDFH

Answer: B



Watch Video Solution

300. In each of the following question find the odd letters pair from the given alternatives.

BEG, KMO, QTV, GJL

A. BEG

B. KMO

C. QTV

D. GJL

Answer: B



Watch Video Solution

301. In each of the following question find the odd letters pair from the given alternatives.

Find out the odd letters from the given alternatives :

A. PD

B. LE

C. IC

D. DB

Answer: B



Watch Video Solution

302. In each of the following question find the odd letters pair from the given alternatives.

Find out the odd letters from the given alternatives :

A. WZ

B. FG

C. UX

D. OR

Answer: B



Watch Video Solution

303. In each of the following question find the odd letters pair from the given alternatives.

Find the odd letters from the given alternatives.

A. POCG

B. KLIZ

C. BUDX

D. FQMV

Answer: D



Watch Video Solution

304. In each of the following question find the odd letters pair from the given alternatives.

Find the odd letters from the given alternatives.

A. HJKL

B. PRST

C. MLNO

D. ACDE

Answer: C



Watch Video Solution

305.

In each of the following question find the odd letters pair from the given alternatives :

A. WZ

B. FG

C. UX

D. OR

Answer: B



Watch Video Solution

306. In each of the following question find the odd letters pair from the given alternatives.

Select the odd letters from the given alternatives.

A. KP

B. DW

C. GT

D. CW

Answer: D



Watch Video Solution

307. In each of the following question find the odd letters pair from the given alternatives.

AG, CE, BF, GF

A. AG

B. CE

C. BF

D. GF

Answer: D



Watch Video Solution

308. In each of the following question find the odd letters pair from the given alternatives.

Select the odd letters from the given alternatives.

A. DAH

B. IFM

C. ROV

D. FHA

Answer: D



Watch Video Solution

309. In each of the following question find the odd letters pair from the given alternatives.

Select the odd letters from the given alternatives.

A. CLU

B. HQZ

C. AJS

D. OXF

Answer: D



Watch Video Solution

310. In each of the following question find the odd letters pair from the given alternatives.

Select the odd letters from the given alternatives.

A. TSR

B. QPO

C. NML

D. ABC

Answer: D



Watch Video Solution

311. In each of the following question find the odd letters pair from the given alternatives.

Select the odd letters from the given alternatives.

A. A) LA

B. B) RP

C. C) OC

D. D) US

Answer: B



Watch Video Solution

312. In each of the following question find the odd letters pair from the given alternatives.

Select the odd letters from the given alternatives.

A. A) A

B. B) U

C. C) E

D. D) G

Answer: D



Watch Video Solution

313. In each of the following question find the odd letters pair from the given alternatives.

Choose the odd letters from the given alternatives :

A. MPS

B. WZC

C. FHJ

D. ADG

Answer: C



Watch Video Solution

314. Find the odd letters from the given alternatives.

A. DEGJ

B. QRTW

C. YZBE

D. JKNQ

Answer: D



Watch Video Solution

315. In-each of the following questions, select the odd word/letters/number from the given alternatives:

A. ACDF

B. TUOP

C. HIVW

D. FGKL

Answer: A



Watch Video Solution

316. In the following question, select the odd letters from the given alternatives :

A. BEHK

B. JMPS

C. PSVY

D. EHKM

Answer: D



Watch Video Solution

317. In the following question, select the odd letters from the given alternatives : AD, PT, EH, JM

A. AD

B. PT

C. EH

D. JM

Answer: B



Watch Video Solution

318. In the following question, select the odd letters from the given alternatives :

A. CX

B. HS

C. BY

D. JP

Answer: D



Watch Video Solution

319. In the following question, select the odd letters from the given alternatives :

A. PU

B. SW

C. CG

D. KO

Answer: A



Watch Video Solution

320. In the following question, select the odd letters from the given alternatives : GJM, PSV, MRP, KNQ

A. GJM

B. PSV

C. MRP

D. KNQ

Answer: C



Watch Video Solution

321. In the following question, select the odd letters from the given alternatives :

A. MT

B. CJ

C. SZ

D. FN

Answer: D



Watch Video Solution

322. In the following question, select the odd letters from the given alternatives :

A. AD

B. QS

C. VX

D. EG

Answer: A



Watch Video Solution

323. In the following question, select the odd letters from the given alternatives :

A. (a) HJLN

B. (b) LNPR

C. (c) SUWY

D. (d) EGIJ

Answer: D



Watch Video Solution

324. In the following question, select the odd letters from the given alternatives :

A. AG

B. RX

C. EK

D. MT

Answer: D



Watch Video Solution

325. In the following question, select the odd letters from the given alternatives :

A. GDA

B. IFC

C. YVT

D. PMJ

Answer: C



Watch Video Solution

326. In the following question, select the odd letters from the given alternatives :

A. CXA

B. MNQ

C. PRN

D. HSU

Answer: D



Watch Video Solution

327. In the following question, select the odd letters from the given alternatives :

A. KQ

B. DJ

C. SZ

D. RX

Answer: C



Watch Video Solution

328. In the following question, select the odd letters from the given alternatives : 1. MN 2. NM 3. OL 4. ET

A. MN

B. NM

C. OL

D. ET

Answer: D



Watch Video Solution

329. In the following question, select the odd letters from the given alternatives :

A. ACFJ

B. RTWA

C. NPSV

D. HJMQ

Answer: C



Watch Video Solution

330. In the following question, select the odd letters from the given alternatives :

A. CD

B. PR

C. ST

D. WX

Answer: B



Watch Video Solution

331. In the following question, select the odd letters from the given alternatives :

A. CEAC

B. PHDF

C. PQMP

D. TVRT

Answer: C



Watch Video Solution

332. In the following question, select the odd letters from the given alternatives :

A. DGJ

B. KNQ

C. RUX

D. ILN

Answer: D



Watch Video Solution

333. In the following question, select the odd letters from the given alternatives:

A. BOH

B. ERK

C. HUO

D. KXQ

Answer: C



Watch Video Solution

334. In the following question, select the odd letters from the given alternatives :

A. PHJ

B. LNQ

C. JLN

D. NRP

Answer: B



Watch Video Solution

335. In the following question, select the odd letters from the given alternatives :

A. JGD

B. NLI

C. XUR

D. QNK

Answer: B



Watch Video Solution

336. Select the odd letters from the given alternatives :

A. (a) AEI

B. (b) JNR

C. (c) SWA

D. (d) FHJ

Answer: D



Watch Video Solution

337. Select the odd letters from the given alternatives :

A. JPV

B. UIO

C. KQW

D. LRX

Answer: B



Watch Video Solution

338. Select the odd letters from the given alternatives :

A. VTS

B. RNM

C. KIH

D. FDC

Answer: A



Watch Video Solution

339. Select the odd letters from the given alternatives :

A. A) ADG

B. B) HKN

C. C) ORU

D. D) BDF

Answer: D



Watch Video Solution

340. Select the odd letters from the given alternatives :

A. A) CEG

B. B) IKM

C. C) ORU

D. D) VXZ

Answer: C



Watch Video Solution

341. In the following question, select the odd letters from the given alternatives.

A. (a) JLN

B. (b) GIK

C. (c) NPR

D. (d) TVY

Answer: D



Watch Video Solution

342. In the following question, select the odd letters from the given alternatives.

A. GJHI

B. MPNO

C. RUST

D. UVXW

Answer: D



Watch Video Solution

343. In the following question, select the odd letters from the given alternatives :

A. GJM

B. CFI

C. SVY

D. PSW

Answer: D



Watch Video Solution

344. In the following question, select the odd letters from the given alternatives :

A. PNK

B. XUR

C. HEB

D. IFC

Answer: A



Watch Video Solution

345. In the following question, select the odd letters from the given alternatives :

A. DG

B. PS

C. VY

D. NR

Answer: D



Watch Video Solution

346. In the following question, select the odd letters from the given alternatives :

A. OMK

B. RPN

C. USP

D. XVT

Answer: C



Watch Video Solution

347. In the following question, select the odd letters from the given alternatives :

A. (a) QP

B. (b) DC

C. (c) XY

D. (d) ML

Answer: C



Watch Video Solution

348. In the following question, select the odd letters from the given alternatives :

A. (a) DCF

B. (b) NMP

C. (c) VUX

D. (d) JIM

Answer: D



Watch Video Solution

349. In the following question, select the odd letter-pair from the given alternatives :

A. EI-LM

B. AE-RT

C. IO-WY

D. OU-DF

Answer: A



Watch Video Solution

350. In the following question, select the odd letters from the given alternatives :

A. DU

B. KP

C. JQ

D. GT

Answer: A



Watch Video Solution

351. In the following question, select the odd letters from the given alternatives :

A. IM

B. DH

C. MS

D. UY

Answer: C



Watch Video Solution

352. In the following question, select the odd letters from the given alternatives :

A. AD

B. VY

C. MQ

D. IL

Answer: C



Watch Video Solution

353. In the following question, select the odd letters from the given alternatives :

A. (a) CY

B. (b) NJ

C. (c) RN

D. (d) SN

Answer: D



Watch Video Solution

354. In the following question, select the odd letters from the given alternatives :

A. GNUB

B. ELSV

C. CJQX

D. FMTA

Answer: B



Watch Video Solution

355. In the following question, select the odd letter/letters from the given alternatives.

A. RQP

B. XWV

C. ZYX

D. AZX

Answer: D



Watch Video Solution

356. In the following question, select the odd letter/letters from the given alternatives :

A. RTV

B. HJL

C. KMP

D. BDF

Answer: C



Watch Video Solution

TYPE-IV

1. In each of the following questions, find out the wrong number in the series. 441, 484, 529, 566, 625

A. 484

B. 529

C. 625

D. 566

Answer: D



Watch Video Solution

2. In each of the following questions, find out the wrong number in the series.

232, 343, 454, 564, 676 .

A. (a) 676

B. (b) 454

C. (c) 343

D. (d) 564

Answer: D



Watch Video Solution

3. In each of the following questions, find out the wrong number in the series.

3 7 9 11 12 14 15

A. 15

B. 14

C. 9

D. 7

Answer: B



Watch Video Solution

4. In each of the following questions, find out the wrong number in the series.

4, 10, 22, 46, 96, 190, 382

A. 96

B. 382

C. 4

D. 10

Answer: A



Watch Video Solution

5. In each of the following questions, find out the wrong number in the series.

5. 81, 66, 53, 43

A. 53

B. 43

C. 81

D. 66

Answer: D



Watch Video Solution

6. In each of the following questions, find out the wrong number in the series.

6, 13, 18, 25, 30, 37, 40

A. (a) 40

B. (b) 25

C. (c) 30

D. (d) 37

Answer: A



Watch Video Solution

7. In each of the following questions, find out the odd number in the series.

3, 5, 11, 14, 17, 21

A. (a) 17

B. (b) 14

C. (c) 3

D. (d) 21

Answer: B



Watch Video Solution

8. In each of the following questions, find out the wrong number in the series.

22, 33, 66, 99, 121, 279, 594

A. (a) 33

B. (b) 121

C. (c) 279

D. (d) 594

Answer: C



Watch Video Solution

9. In each of the following questions, find out the wrong number in the series.

6, 9, 12, 15, 18, 22

A. 12

B. 18

C. 22

D. 6

Answer: C



Watch Video Solution

10. In each of the following questions, find out the wrong number in the series.

6, 18, 36, 108, 216, 648, 1290, 3888

A. 36

B. 108

C. 1290

D. 648

Answer: C



Watch Video Solution

11. In each of the following questions, find out the wrong number in the series.

3, 5, 8, 11, 17, 23

A. 8

B. 11

C. 17

D. 23

Answer: B



Watch Video Solution

12. In each of the following questions, find out the wrong number in the series.

37, 45, 49, 65, 79

A. 37

B. 45

C. 49

D. 65

Answer: C



Watch Video Solution

13. In each of the following questions, find out the wrong number in the series.

44, 38, 35, 37, 48, 76, 135

A. 35

B. 37

C. 76

D. 135

Answer: D



Watch Video Solution

14. In each of the following questions, find out the wrong number in the series.

3, 9, 27, 81, 243, 730

A. 27

B. 81

C. 243

D. 730

Answer: D



Watch Video Solution

15. In each of the following questions, find out the wrong number in the series.

2, 10, 30, 68, 120, 222

A. (a) 68

B. (b) 120

C. (c) 30

D. (d) 222

Answer: B



Watch Video Solution

16. In each of the following questions, find out the wrong number in the series.

462, 422, 380, 342, 306

A. 422

B. 380

C. 342

D. 306

Answer: A



Watch Video Solution

17. In each of the following questions, find out the wrong number in the series.

1956, 1968, 1976, 1982, 1988, 1992

A. 1956

B. 1976

C. 1982

D. 1992

Answer: C



Watch Video Solution

18. In each of the following questions, find out the wrong number in the series.

27, 125, 216, 343

A. 125

B. 216

C. 343

D. 27

Answer: B



Watch Video Solution

19. In each of the following questions, find out the odd number in the series.

10, 13, 234, 681, 997

A. (a) 681

B. (b) 10

C. (c) 234

D. (d) 13

Answer: A



Watch Video Solution

20. In each of the following questions, find out the wrong number in the series.

27, 81, 1331, 125

A. 125

B. 27

C. 1331

D. 81

Answer: D



Watch Video Solution

21. In each of the following questions, find out the wrong number in the series.

17, 23, 31, 41, 53, 69

A. (a) 23

B. (b) 31

C. (c) 41

D. (d) 69

Answer: D



Watch Video Solution

22. In the following questions, find the odd sequence of number pair from the given alternatives.

A. (a) 1, 2, 4, 8

B. (b) 2, 6, 10, 14

C. (c) 3, 9, 15, 21

D. (d) 7, 21, 35, 49

Answer: A



Watch Video Solution

23. Find the wrong number in the series

30, 27, 36, 45, 72

A. 30

B. 27

C. 36

D. 72

Answer: A



Watch Video Solution

24. Which one number is wrong in the series?

<i>A</i>	<i>B</i>	<i>C</i>	<i>D</i>	<i>E</i>
225	256	212	289	324

A. (a) 225

B. (b) 256

C. (c) 212

D. (d) 324

Answer: C



Watch Video Solution

25. Find out the false date of birth given in the series.

1. 15-02-1969

2. 16-03-1969

3. 18-04-1969

4. 30-01-1969

5. 31-02-1970

6. 31-12-1969

A. 4

B. 6

C. 3

D. 5

Answer: D



Watch Video Solution

26. Which number is wrong in the given series?

12439, 23549, 34659, 45769, 57689

A. 34659

B. 23549

C. 57689

D. 12439

Answer: C



Watch Video Solution

27. Find out the incorrect term in the series.

2, 5, 10, 3, 6, 18, 4, 7, 30

A. (a) 6

B. (b) 30

C. (c) 10

D. (d) 7

Answer: B



Watch Video Solution

28. Find the wrong number in the given series?

15, 28, 30, 39, 48

A. 28

B. 39

C. 30

D. 15

Answer: A



Watch Video Solution

29. Which number is wrong in the given series?

225, 169, 144, 100, 64, 48

A. (a) 225

B. (b) 144

C. (c) 64

D. (d) 48

Answer: D



Watch Video Solution

30. The set of numbers below follows a particular pattern. Which of the numbers in the options does not follow the pattern?

60, 120, 210, 336, 1716

A. (a) 720

B. (b) 990

C. (c) 504

D. (d) 1310

Answer: D



Watch Video Solution

31. In the following question, select the odd letters from the given alternatives.

A. (a) AE

B. (b) GK

C. (c) YC

D. (d) MG

Answer: B



Watch Video Solution

32. Find the wrong number in the series.

A. 29

B. 36

C. 30

D. 34

Answer: A



Watch Video Solution

33. Which one is wrong number in the given series ?

7 56 447 3584 28672

A. 3584

B. 56

C. 7

D. 447

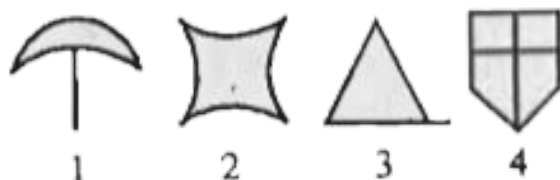
Answer: D



Watch Video Solution

MULTIPLE CHOICE QUESTION

1. A series of figures are given which can be grouped into classes. From the responses, select the group into which the figures can be classified.



(1) 2, 5, 9

3, 6, 8

1, 4, 7

(3) 2, 5, 9

3, 4, 8

1, 6, 7

(2) 1, 6, 7

3, 5, 8

2, 4, 9

(4) 1, 3, 8

2, 4, 6

5, 7, 9



Watch Video Solution

2. From the given responses, find the odd figure out.



(1)



(2)



(3)



(4)



Watch Video Solution

3. From the given responses, find the odd figure out.



(1)



(2)



(3)



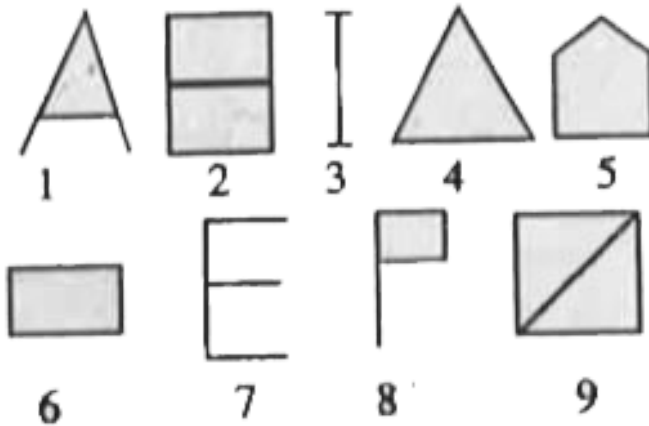
(4)



Watch Video Solution

4. A series of figures are given which can be grouped into classes. Select the group into

which the figures can be classified.



A. 1, 3, 4 2, 5, 9 6, 7, 8

B. 1, 2, 3 4, 5, 6 7, 8, 9

C. 1, 5, 9 2, 4, 7 3, 6, 8

D. 3, 7, 8 1, 6, 5 4, 2, 9

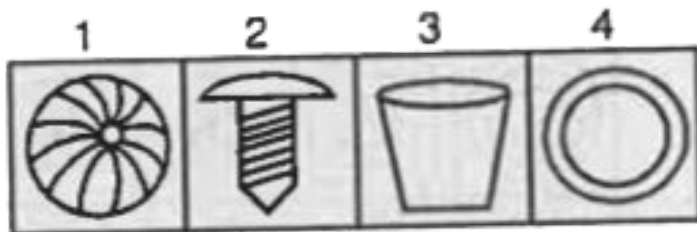
Answer: A



Watch Video Solution

5. A series of figures are given which can be grouped into classes. Select the groups into

which the figures can be classified.



1, 4, 7	1, 3, 6	1, 2, 4	1, 4, 9
2, 5, 8	2, 5, 8	3, 5, 8	2, 5, 8
3, 6, 9	4, 7, 9	6, 7, 9	3, 6, 7

(1)

(2)

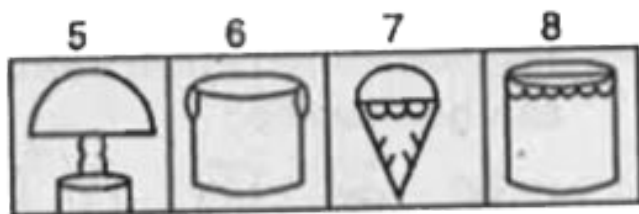
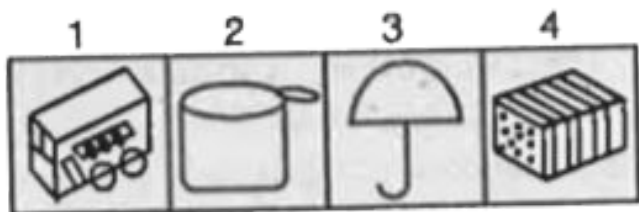
(3)

(4)



Watch Video Solution

6. A series of figures are given which can be grouped into classes. Select the groups into which the figures can be classified.



1, 4, 9	1, 4, 5	1, 4, 6	1, 3, 6
2, 6, 8	3, 6, 8	2, 7, 8	2, 4, 7
3, 5, 7	2, 7, 9	3, 5, 9	5, 8, 9

(1)

(2)

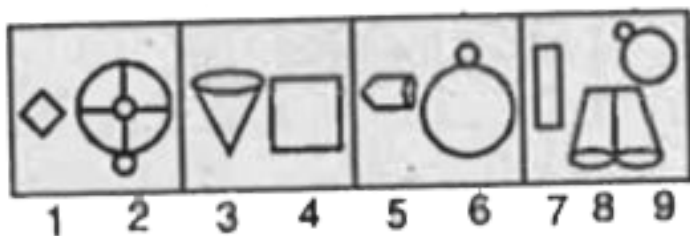
(3)

(4)



Watch Video Solution

7. A series of figures are given which can be grouped into classes. Select the groups into which the figures can be classified.



1, 2, 4	9, 7, 6	2, 3, 4	1, 4, 7
3, 5, 6	5, 3, 1	7, 6, 5	2, 6, 9
8, 7, 9	4, 8, 2	9, 8, 1	3, 5, 8

(1)

(2)


(3)

(4)



Watch Video Solution

8. A series of figures are given which can be grouped into classes. Select the groups into which the figures can be classified.



A. (1, 2, 3), (4, 5, 6), (7, 8, 9)

B. (3, 6, 9), (1, 5, 8), (2, 4, 7)

C. (5, 6, 9), (4, 7, 8), (1, 2, 3)

D. (1, 5, 9), (3, 4, 8), (2, 6, 7)

Answer: D



Watch Video Solution

9. A series of figures are given which can be grouped into classes. Select the groups into


which the figures can be classified.



1



2



3



4



5



6



7



8



9



Watch Video Solution

10. A series of figures are given which can be grouped into classes. Select the groups into

which the figures can be classified.

A	M	B	H
1	2	3	4
W	D	E	N
5	6	7	8
	U		
	9		

A. (a) 136, 289, 475

B. (b) 148, 236, 579

C. (c) 148, 257, 369

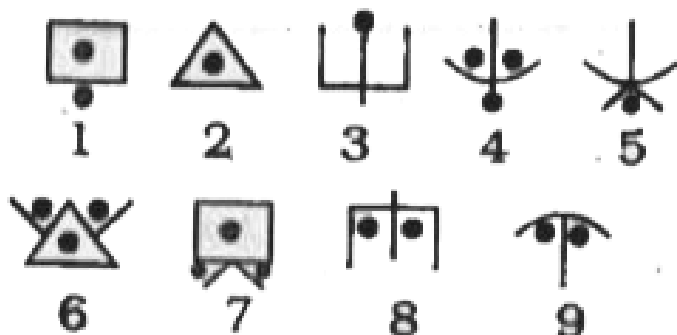
D. (d) 147, 358, 269

Answer: C



Watch Video Solution

11. A series of figures are given which can be grouped into classes. Select the groups into which the figures can be classified from the given responses.



A. 1, 7, 8; 2, 6, 5; 3, 4, 9

B. 1, 8, 9; 2, 3, 5; 4, 6, 7

C. 2, 3, 5; 1, 7, 8; 4, 6, 9

D. 2, 6, 7; 1, 3, 4; 5, 8, 9

Answer: B



Watch Video Solution

12. A series of figures are given which can be grouped into classes. Select the groups into which the figures can be classified from the

given responses.



A. a. (1, 4, 6) (2, 3, 8) (5, 7, 9)

B. b. (2, 3, 8)(4, 5, 7)(1, 6, 9)

C. c. (5, 7, 9,)(3, 4, 8)(2, 9, 1)

D. d. (1, 4, 6)(2, 3, 8)(6, 8, 8)

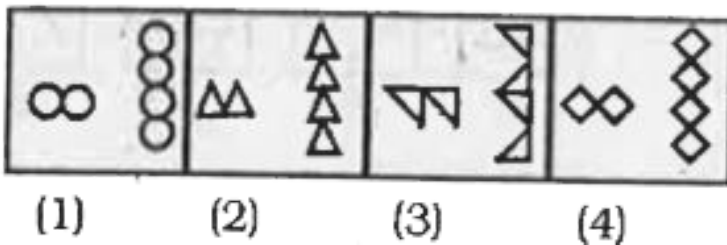
Answer: A



Watch Video Solution

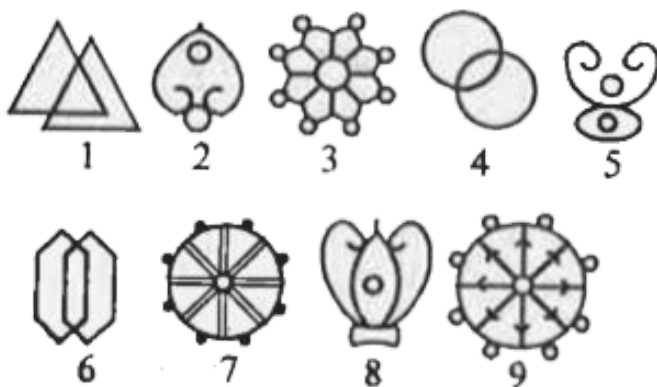
13.

Select the one which is different from the other three responses.



Watch Video Solution

14. A series of figures are given which can be grouped into classes. Select the group into which the figures can be classified from the given responses.



A. (a) 1 4 8, 2 5 7, 3 9 6

B. (b) 1 4 6, 2 5 8, 3 7 9

C. (c) 1 4 6, 2 5 7, 3 8 9

D. (d) 1 2 3, 4 5 6, 7 8 9

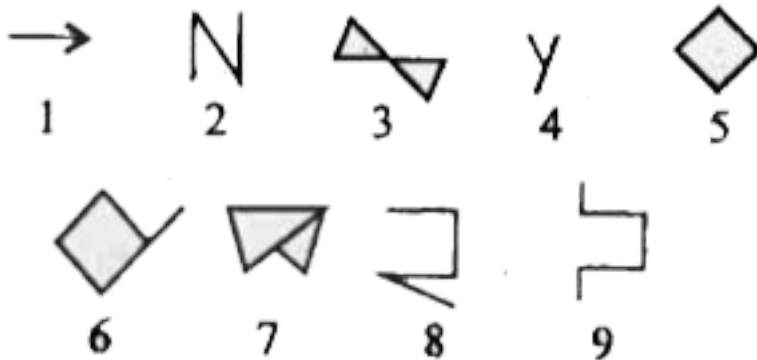
Answer: B



Watch Video Solution

15. A series of figures are given which can be grouped into classes. Select the group into which the figures can be classified from the

glven responses.



A. 1, 5, 6 ; 2, 3, 4 ; 7, 8, 9

B. 1, 2, 4 ; 3, 5, 8 ; 6, 7, 9

C. 5, 6, 7 ; 1, 2, 4 ; 3, 8, 9


D. 1, 2, 4 ; 3, 5, 7 ; 6, 8, 9

Answer: B



Watch Video Solution


16. Find the odd figure.



Watch Video Solution

17. A series of figures is given which can be grouped into classes. Select the group from the responses into which the figures can be

classified :



A. (a) 1 2 3, 4 5 6, 7 8 9

B. (b) 1 5 7, 2 4 9, 3 6 8

C. (c) 1 7 9, 3 6 8, 2 4 5

D. (d) 1 5 7, 2 4 8, 3 6 9

Answer: B



Watch Video Solution


18. A series of figures is given which can be grouped into classes. Select the group from the given responses into which the figures can be classified :



1



2




3



4



5



6



7



8



9

A. (a) 1 2 3, 4 8 9, 5 7 6

B. (b) 4 5 7, 3 1 2, 7 8 9

C. (c) 1 3 7, 8 9 4, 2 5 6

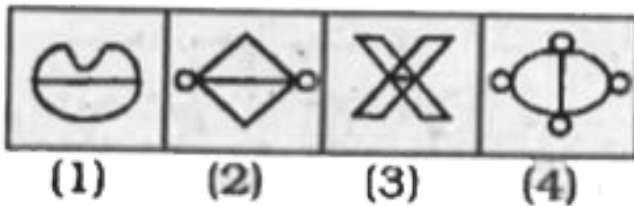
D. (d) 3 5 6, 8 7 4, 9 1 2

Answer: C



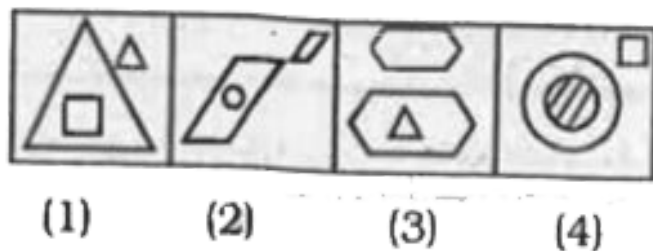
Watch Video Solution

19. Find the odd figure :



Watch Video Solution

20. In the following question select the one which is different from the other three.



Watch Video Solution

21. A series of figures are given which can be grouped into classes. From the responses, select the groups into which the figures can

be classified.



A. 1, 4, 7, 2, 5, 8, 3, 6, 9

B. 1, 4, 5, 2, 6, 8, 3, 7, 9

C. 1, 7, 9, 3, 5, 8, 2, 4, 6

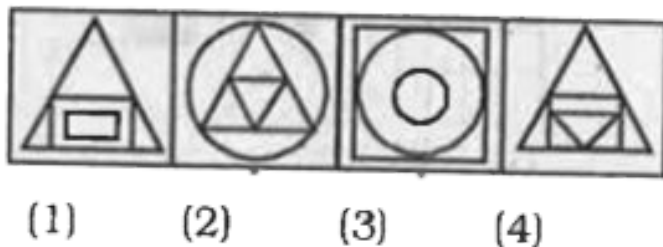
D. 1, 6, 9, 2, 5, 8, 3, 4, 7

Answer: A



Watch Video Solution

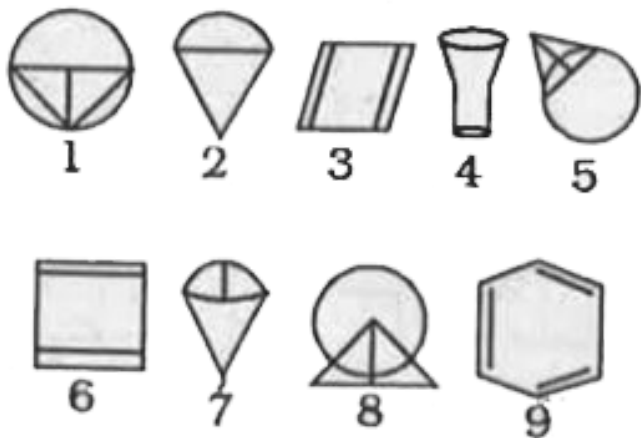
22. Find the odd figure :



Watch Video Solution

23. A series of figures, which can be grouped into classes, is given. From the responses, select the groups into which the figures can

be classified.



A. (a) 1 5 8, 2 6 7, 3 4 9

B. (b) 1 5 7, 2 6 8, 3 4 9

C. (c) 1 7 8, 2 6 9, 3 4 5

D. (d) 1 5 8, 2 4 7, 3 6 9

Answer: D



Watch Video Solution


24. Select the one which is different from the other three responses.



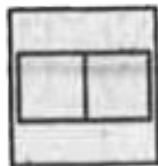
(1)



(2)



(3)



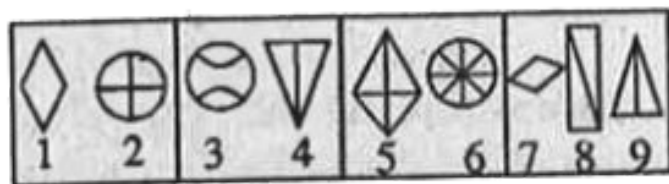
(4)



Watch Video Solution

25. In the following question, a series of figures are given which can be grouped into

classes. From the responses, select the groups into which the figures can be classified.



Answer figures :

2	3	6	7	8	6	8	5	1	4	5	6
1	5	7	9	5	3	7	9	2	7	8	9
4	9	8	2	1	4	4	3	6	1	2	3

(1)

(2)

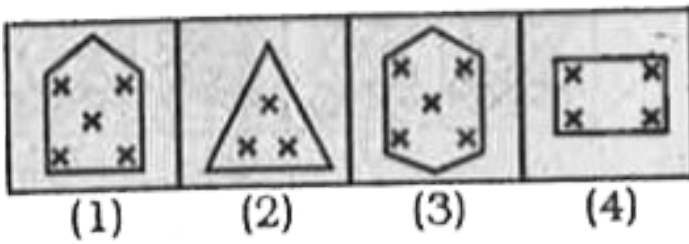
(3)

(4)



Watch Video Solution

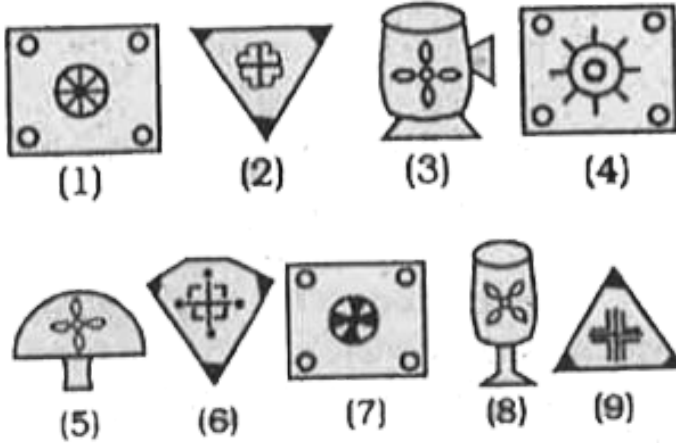
26. From the given responses, find the odd figure out:



Watch Video Solution

27. A series of figures is given which can be grouped into classes. From the responses, select the groups into which the figures can

be classified:



A. (a) 1 4 7, 3 6 9, 2 5 8

B. (b) 1 4 7, 2 6 9, 3 5 8

C. (c) 1 6 9, 2 4 7, 3 5 8

D. (d) 1 5 7, 2 6 9, 3 4 8


Answer: B



[Watch Video Solution](#)

28. A series of figures is given which can be grouped into classes. Select the group into which the figures can be classified from the

given responses.




(1)




(2)




(3)




(4)



(5)




(6)



(7)



(8)



(9)

A. A) 1, 4, 7, 2, 5, 9, 3, 8, 6

B. B) 2, 6, 9, 1, 4, 7, 5, 8, 3

C. C) 1, 4, 7, 2, 3, 6, 5, 8, 9

D. D) 3, 5, 1, 4, 7, 8, 6, 2, 9

Answer: C



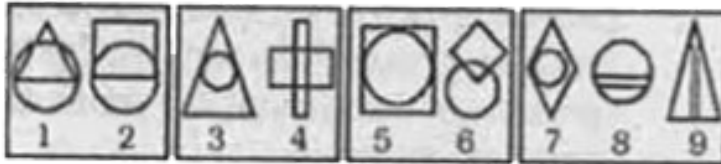
Watch Video Solution

29.

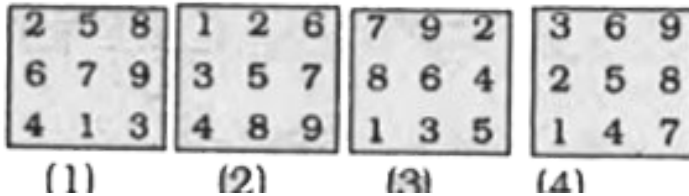
In question, a series of figures are given which can be grouped into classes. From the responses, select the groups into which the

figures can be classified.

Question Figures :



Answer Figures :



Watch Video Solution

30. In the following question, select the one which is different from the other three

responses.



(1)



(2)



(3)



(4)



Watch Video Solution

31. In the following question, find the odd one out from the given alternatives .



(1)



(2)



(3)



(4)



Watch Video Solution

32. In question, a series of figures are given which can be grouped into classes. Select the group into which the figures can be classified from the given responses.



1 2



3 4



5 6



7 8 9

(1) 1 2 4

3 5 6

8 7 9

(3) 2 3 4

7 6 5

9 8 1

(2) 9 7 6

5 3 1

4 8 2

(4) 1 4 7

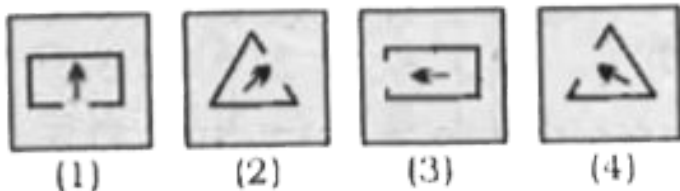
2 6 9

3 5 8



Watch Video Solution

33. Select the one which is different from the other three responses.



Watch Video Solution


34. Select the one which is different from the other three responses.



(1)



(2)



(3)



(4)



Watch Video Solution

35. Find the odd word figure from the given responses.



(1)



(2)



(3)



(4)



Watch Video Solution

36. In question, a series of figures are given which can be grouped into classes. Select the group into which the figures can be classified from the given responses.



1



2



3



4



5



6



7



8



9

A. 1, 4, 9, 2, 5, 8, 3, 6, 7

B. 2, 5, 8, 1, 4, 6, 3, 7, 9

C. 3, 6, 7, 2, 5, 8, 1, 2, 9

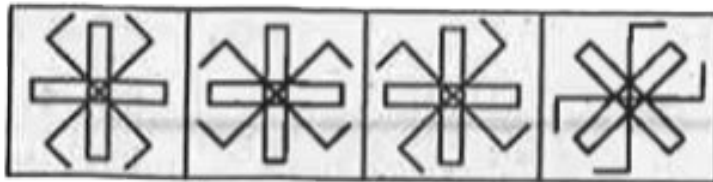
D. 2, 5, 8, 3, 6, 9, 4, 6, 7

Answer: A



Watch Video Solution

37. Find the odd figure from the given responses.



(1)

(2)

(3)

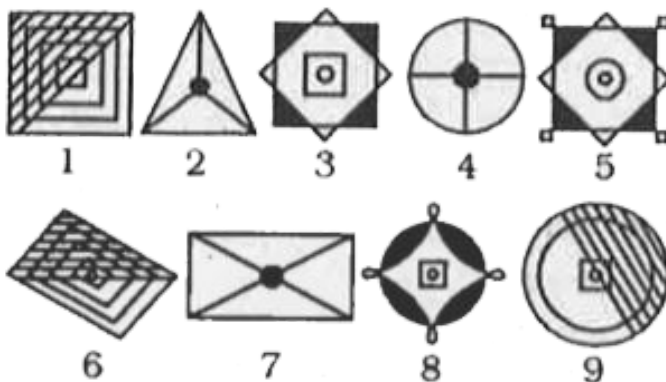
(4)



Watch Video Solution

38. A series of figures are given which can be grouped into classes. Select the group into which the figures can be classified from the given responses :

given responses :



A. 1, 6, 9, 2, 4, 7, 4, 9, 3

B. 1, 6, 9, 2, 4, 7, 3, 9, 8

C. 1, 3, 5, 2, 6, 7, 4, 8, 9

D. 1, 6, 9, 2, 4, 7, 3, 5, 8

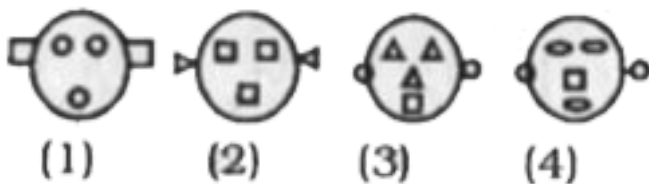
Answer: D



Watch Video Solution

39. In the question given below there are four figures in question, out of which one is different from the rest. Identify the odd man

out.



Watch Video Solution

40. In the question given below there are four figures in question, out of which one is different from the rest. Identify the odd man

out.



(1)



(2)



(3)



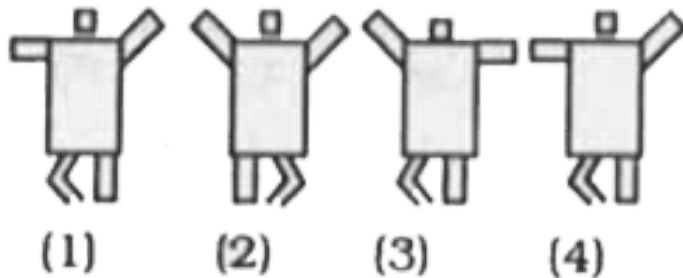
(4)



Watch Video Solution

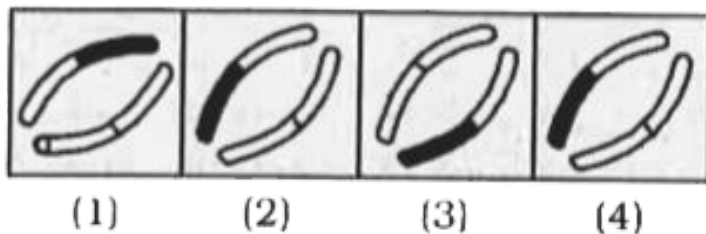
41. In the question given below there are four figures in question, out of which one is different from the rest. Identify the odd man

out.



Watch Video Solution

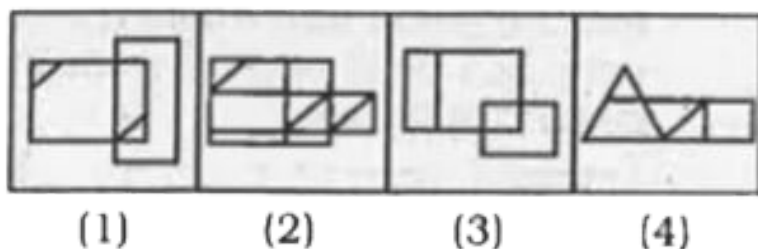
42. Select the one which is different from the other three responses.





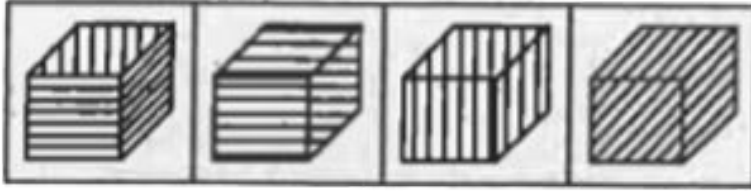
Watch Video Solution

43. Select the one which is different from the other three responses.



Watch Video Solution

44. Select the one which is different from the other three responses.



(1)

(2)

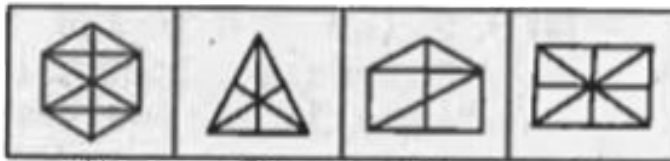
(3)

(4)



Watch Video Solution

45. Select the odd figure from the given responses.



(1)

(2)

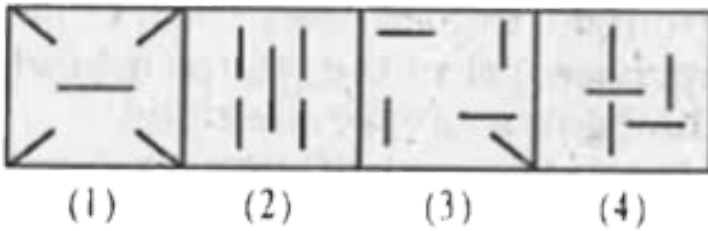
(3)

(4)



Watch Video Solution

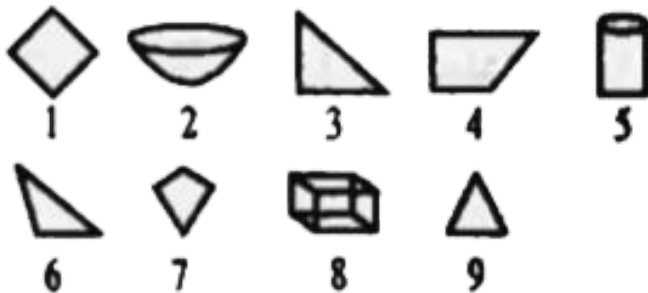
46. Select the odd figure from the given responses.



Watch Video Solution

47. A series of figures are given which can be grouped into classes. Select the group into which the figures can be classified from the

given responses :



A. 1,4,7, 2,5,8, 3,6,9,

B. 1,4,7, 2,5,9, 3,6,7,

C. 1,2,3, 4,5,6, 7,8,9,

D. 1,3,4, 2,5,8, 6,7,9,

Answer: A

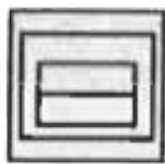


Watch Video Solution

48. Select the odd figure from the given responses.



(1)



(2)



(3)

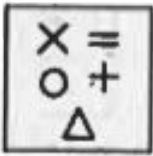


(4)



Watch Video Solution

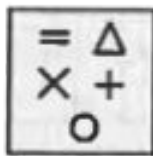
49. Select the odd figure from the given responses.



(1)



(2)



(3)



(4)



Watch Video Solution

50.

A series of figures are given which can be grouped into classes. Select the group into which the figures can be classified from the

given responses.



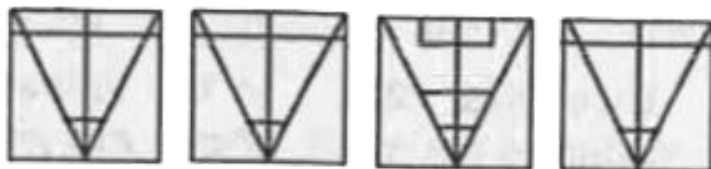
1

2

3

4

5



6

7

8

9

A. (a) 1 2 3, 4 5 8, 6 9 7

B. (b) 1 2 5, 3 4 8, 6 7 9

C. (c) 1 2 6, 3 4 7, 5 6 9

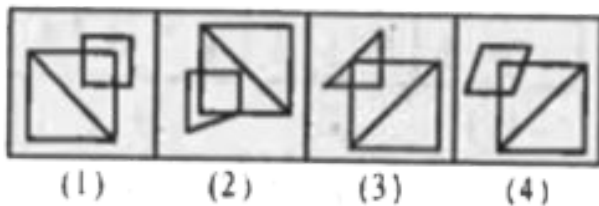
D. (d) 1 5 8, 2 3 4, 6 7 9

Answer: D



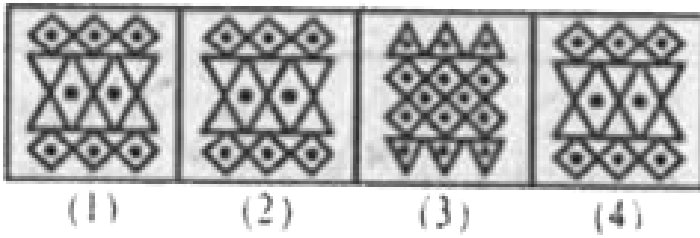
[Watch Video Solution](#)

51. In the following question find the odd figure from the given alternatives.



[Watch Video Solution](#)

52. In the following question find the odd figure from the given alternatives.



Watch Video Solution

53. A series of figures are given which can be grouped into classes. Select the group into which the figures can be classified from the given responses.



A. 127, 359, 468

B. 179, 258, 346

C. 179, 258, 369

D. 179, 358, 246

Answer: D



Watch Video Solution

54. In the following question find the odd figure from the given responses.



(1)



(2)



(3)



(4)



Watch Video Solution

55. A series of figures is given which can be grouped into classes . Select the group into which the figures can be classified from the

given responses.



1



2



3



4



5



6



7



8



9

A. 1 3 4, 2 5 9, 6 7 8

B. 1 4 8, 2 5 7, 3 6 9

C. 2 5 6, 3 4 8, 1 7 9

D. 3 4 8, 2 3 5, 1 6 7

Answer: B

56. A series of figures is given which can be grouped into classes. Select the group into which the figure can be classified from the given responses :



A. 1, 4, 6, 2, 5, 7, 3, 8, 9

B. 1, 2, 4, 5, 6, 7, 3, 8, 9

C. 1, 4, 6, 3, 8, 7, 2, 5, 9

D. 1, 2, 6, 4, 7, 9, 3, 5, 8

Answer: A



Watch Video Solution

57. In the following question find the odd figure from the given responses.



(1)



(2)



(3)

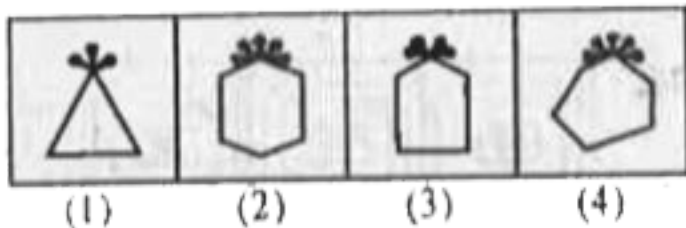


(4)



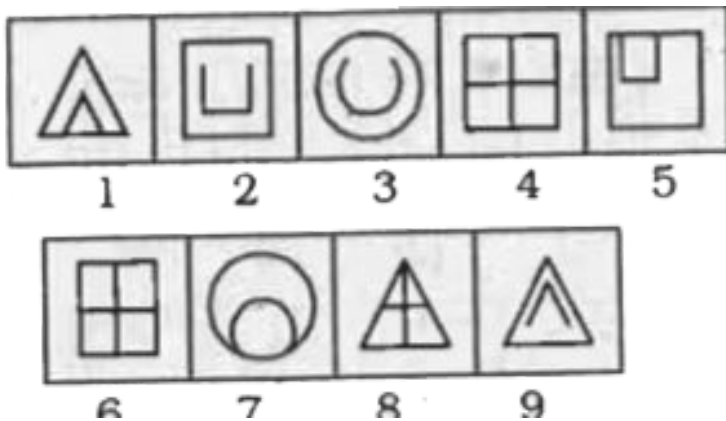
Watch Video Solution

58. In the following question, select the one which is different from the other responses.



Watch Video Solution

59. A series of figure are given, and these can be grouped into classes. Select from amongst the alternatives one set of group into which the figures can be classified ?



A. (a) 2 4 7, 1 3 5, 6 8 9

B. (b) 1 5 7, 2 3 9, 4 6 8

C. (c) 4 3 2, 1 5 7, 6 8 9

D. (d) 2 4 5, 1 3 9, 6 7 8


Answer: B



Watch Video Solution

60. A series of figures are given, and these can be grouped into classes. Select from amongst the alternatives one set of groups into which

these figures can be classified.



A. (a) 1 3 6, 2 4 6, 5 7 9

B. (b) 1 4 9, 3 6 8, 2 5 7

C. (c) 3 4 7, 9 8 7, 4 3 1

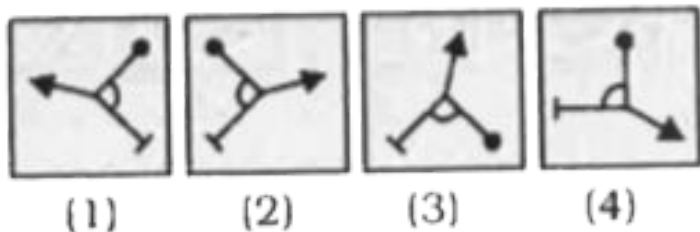
D. (d) 2 3 6, 9 3 4, 6 3 2

Answer: B



Watch Video Solution

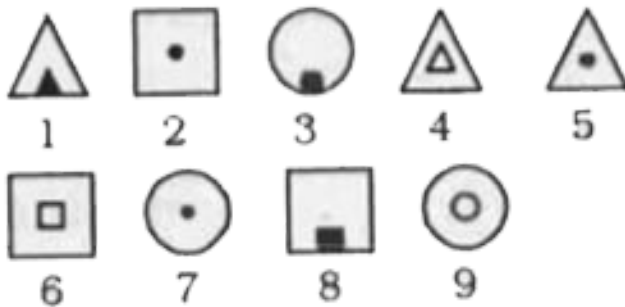
61. In the following question, find the odd figure from the given responses.



Watch Video Solution

62. A series of figures are given which can be grouped into classes. Select the group into which the figures can be classified from the

given responses.



A. 1, 4, 5, 2, 6, 8, 3, 7, 9

B. 1, 3, 7, 4, 6, 9, 2, 5, 8

C. 1, 3, 7, 2, 5, 8, 4, 6, 9

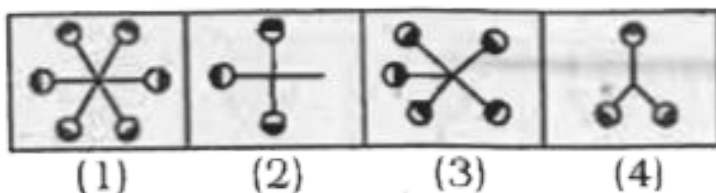
D. 1, 3, 8, 2, 5, 7, 4, 6, 9

Answer: D



Watch Video Solution

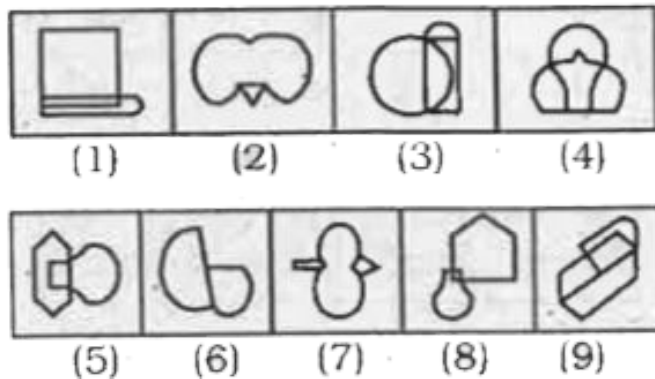
63. In the following question find the odd figure from the given responses.



Watch Video Solution

64. A series of figures is given which can be grouped into classes. Select the group into which the figures can be classified from the

given responses.



A. (a) 139, 267, 458

B. (b) 139, 278, 456

C. (c) 139, 457, 268

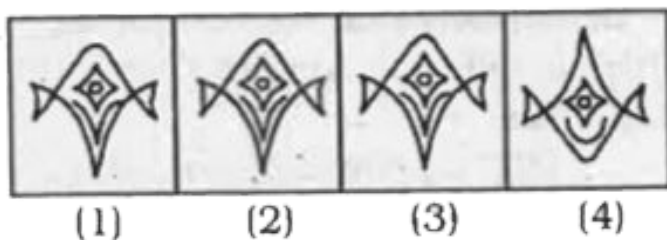
D. (d) 135, 249, 678

Answer: A



Watch Video Solution

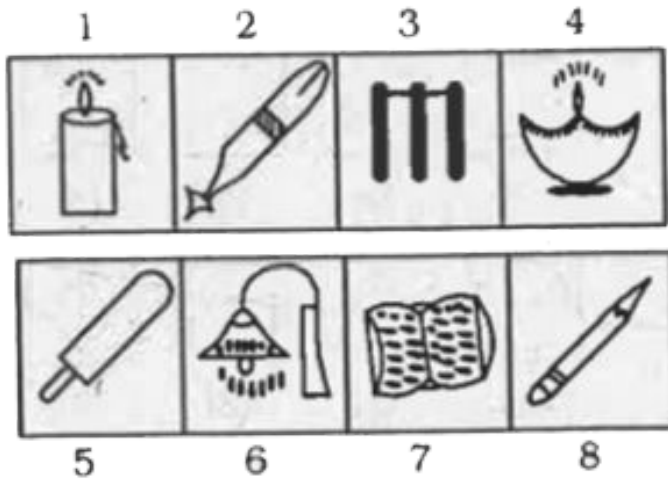
65. In the following question, find the odd figure from the given responses.



Watch Video Solution

66. A series of figures is given which can be grouped into classes. Select the group into

which the figures can be classified from the given responses.



A. (a) 146, 35, 278

B. (b) 258, 138, 46

C. (c) 37, 145, 258

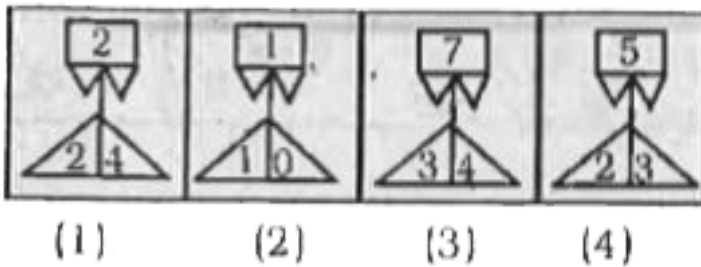
D. (d) 258, 16, 47

Answer: A



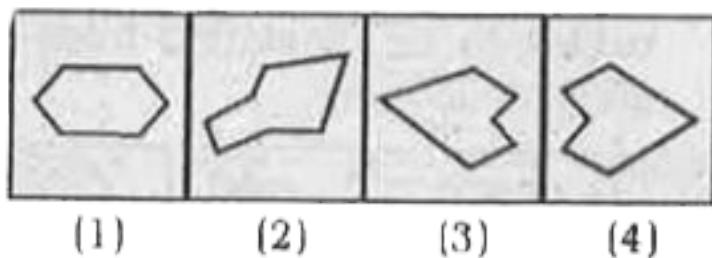
Watch Video Solution

67. In the following question select the one which is different from the other three responses.



Watch Video Solution

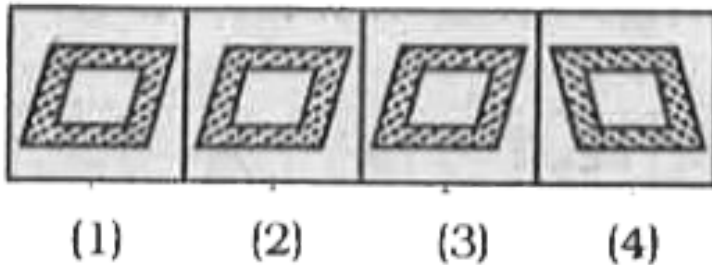
68. In the following question select the one which is different from the other three responses.



Watch Video Solution

69. In the following question select the one which is different from the other three

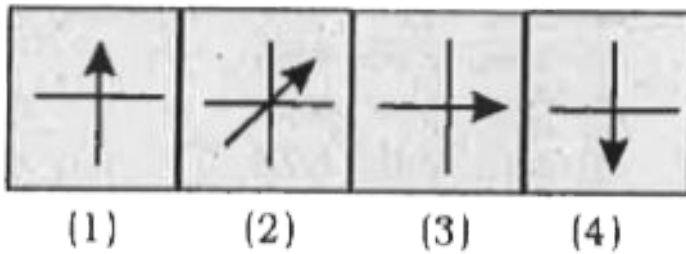
responses.



Watch Video Solution

70. In the following question select the one which is different from the other three

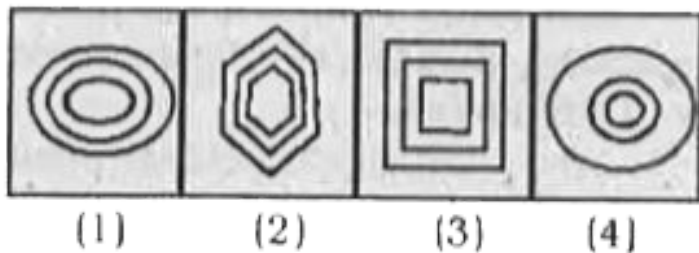
responses.



Watch Video Solution

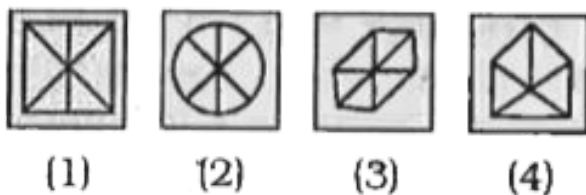
71. In the following question select the one which is different from the other three

responses.




Watch Video Solution

72. Select the one which is different from the other three responses.




Watch Video Solution


73. Select the one which is different from the other three responses.




(1)



(2)



(3)




(4)



Watch Video Solution

74. Select the one which is different from the other three responses.



(1)



(2)



(3)




(4)




Watch Video Solution


75. Select the one which is different from the other three responses.




(1)



(2)



(3)



(4)



Watch Video Solution


76. Select the one which is different from the other three responses.




(1)



(2)



(3)




(4)



Watch Video Solution

77. Select the one which is different from the other three responses.



(1)

(2)


(3)

(4)



Watch Video Solution

78. Select the one which is different from the other three responses.



(1)

(2)

(3)

(4)



Watch Video Solution

79. Select the one which is different from the other three responses.



(1)

(2)

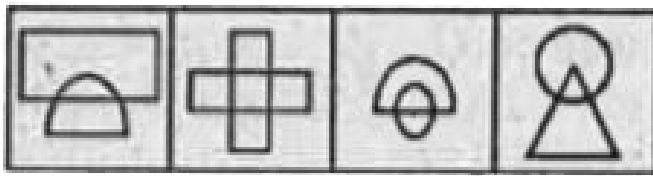
(3)

(4)



Watch Video Solution

80. Select the one which is different from the other three responses.



(1)

(2)


(3)

(4)



Watch Video Solution

81. In following question select the one which is different from the other three responses.



(1)

(2)

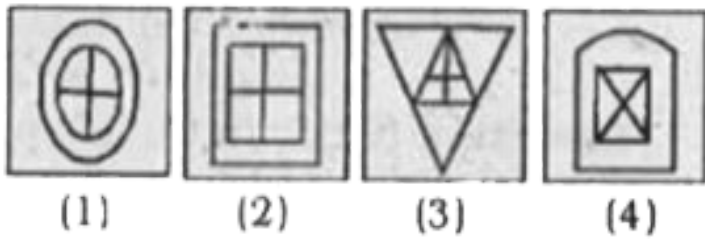
(3)

(4)



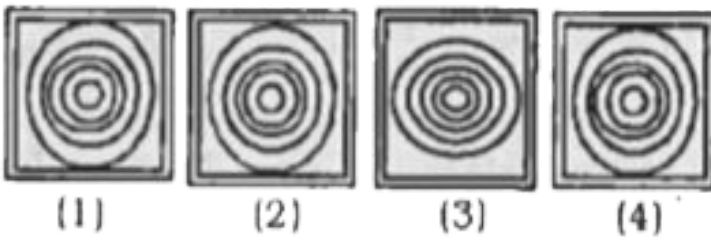
Watch Video Solution

82. In following question select the one which is different from the other three responses.



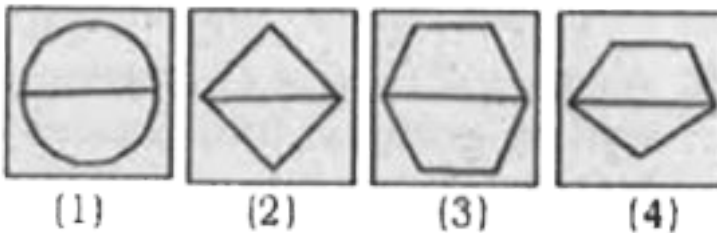
Watch Video Solution

83. In following question select the one which is different from the other three responses.



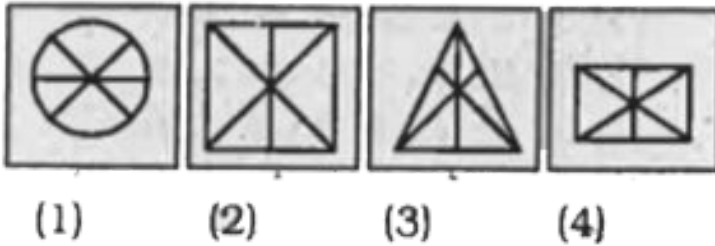
 [Watch Video Solution](#)

84. In following question select the one which is different from the other three responses.



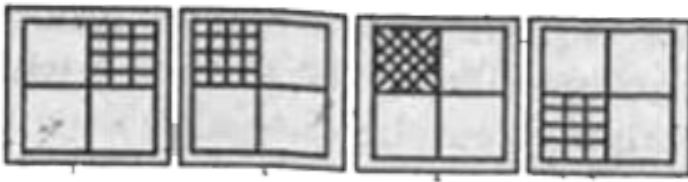
 [Watch Video Solution](#)

85. Select the one which is different from the other three responses.



Watch Video Solution

86. Select the one which is different from the other three responses.



(1)

(2)

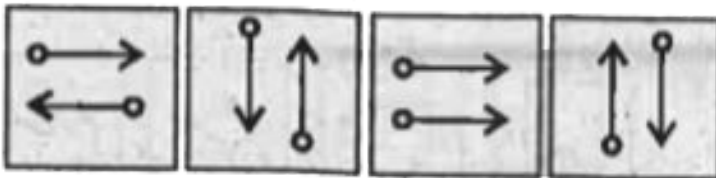
(3)

(4)



Watch Video Solution

87. Select the one which is different from the other three responses.



(1)

(2)

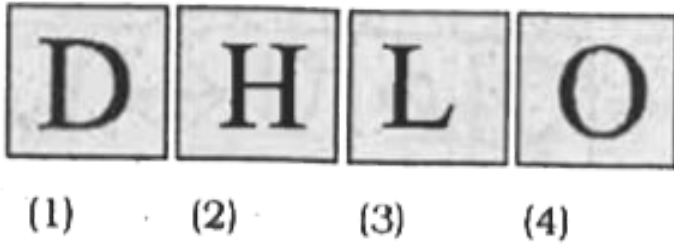
(3)

(4)



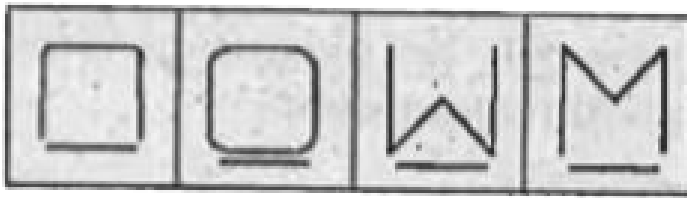
Watch Video Solution

88. Select the one which is different from the other three responses.



Watch Video Solution

89. Select the one which is different from the other three responses.



(1)

(2)

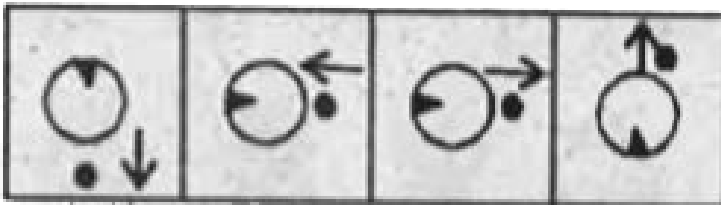
(3)

(4)



Watch Video Solution

90. Select the one which is different from the other three responses.



(1)

(2)

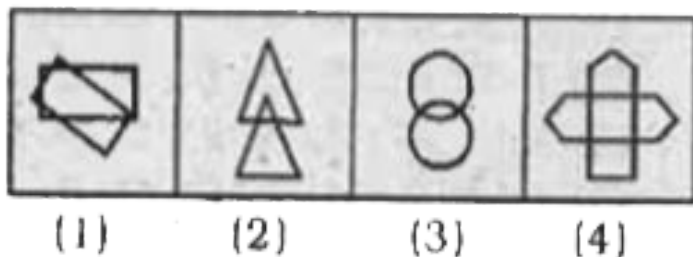
(3)

(4)



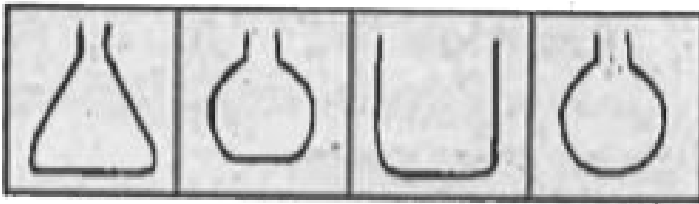
Watch Video Solution

91. Select the one which is different from the other three responses.



Watch Video Solution

92. Select the one which is different from the other three responses.



(1)

(2)

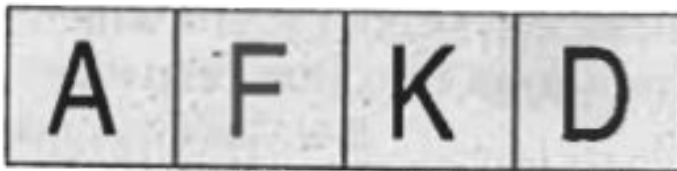
(3)

(4)



Watch Video Solution

93. Select the one which is different from the other three.



(1)

(2)

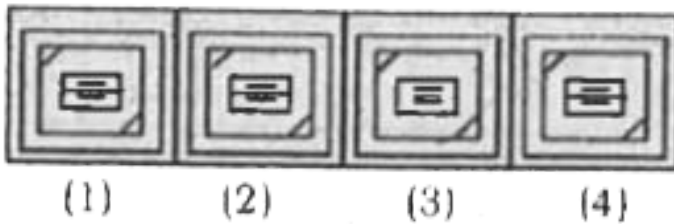
(3)

(4)



Watch Video Solution

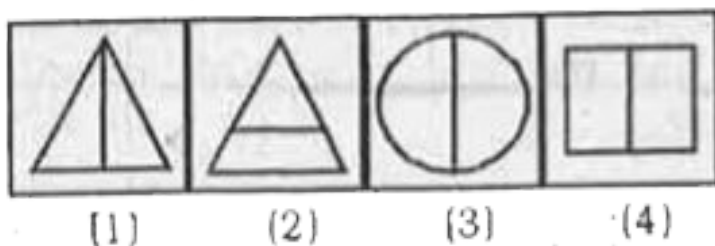
94. Select the one which is different from the other three.



Watch Video Solution

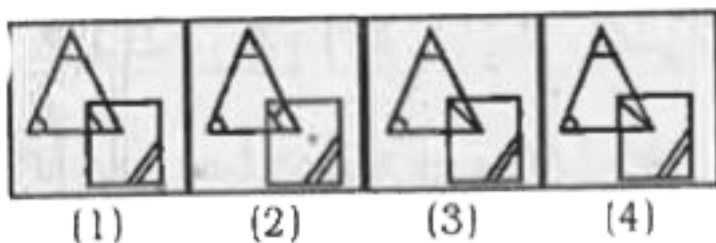
95. In the following question select the one which is different from the other three

responses.



Watch Video Solution

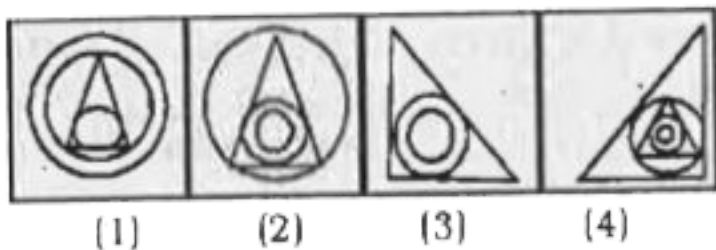
96. In the following question select the one which is different from the other three responses.





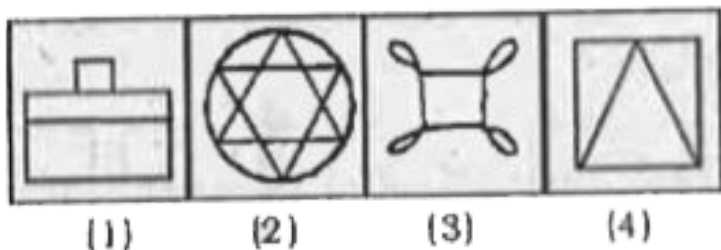
Watch Video Solution

97. In the following question select the one which is different from the other three responses.



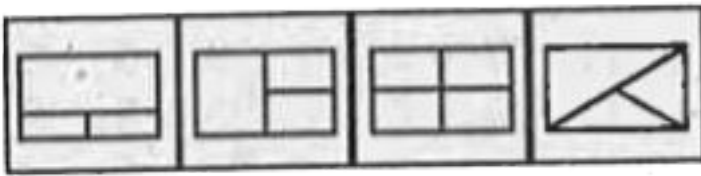
Watch Video Solution

98. In the following question select the one which is different from the other three responses.



Watch Video Solution

99. Select the one which is different from the other three.



(1)

(2)

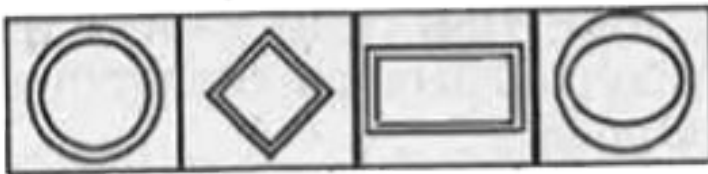
(3)

(4)



Watch Video Solution

100. Select the one which is different from the other three.



(1)

(2)

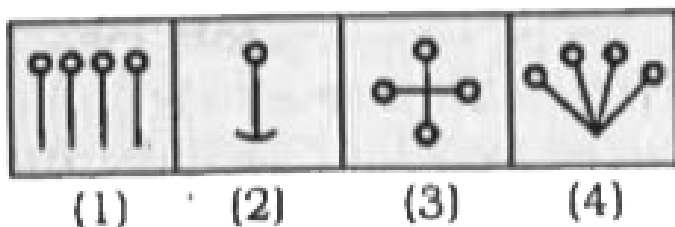
(3)

(4)



Watch Video Solution

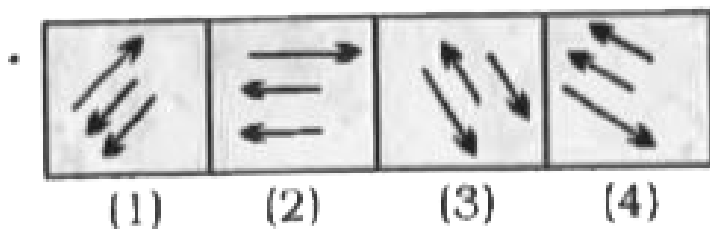
101. In the following question select the one which is different from the other three responses.



Watch Video Solution

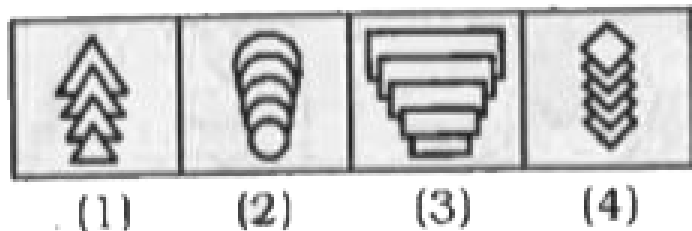
102. In the following question select the one which is different from the other three

responses.



Watch Video Solution

103. In the following question select the one which is different from the other three responses.





Watch Video Solution

104. A series of figures are given which can be grouped into classes. Select the group into which the figures can be classified from the given responses.



A. 2, 4, 5 & 1, 8 & 3, 6, 7

B. 1, 4, 5, 8, 2, 3, 6, 7

C. 2, 3, 5, 7, 1, 4, 6, 8

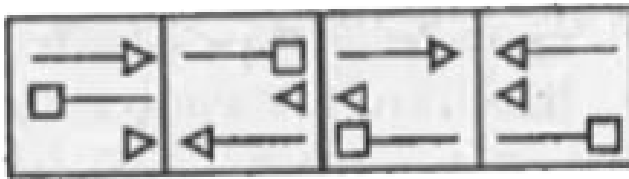
D. 1, 2, 5, 8, 3, 4, 6, 7

Answer: D



Watch Video Solution

105. Select the one which is different from the other three responses.



(1)

(2)

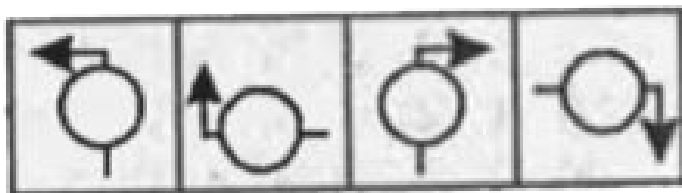
(3)

(4)



[Watch Video Solution](#)

106. Select the one which is different from the other three responses.



(1)

(2)

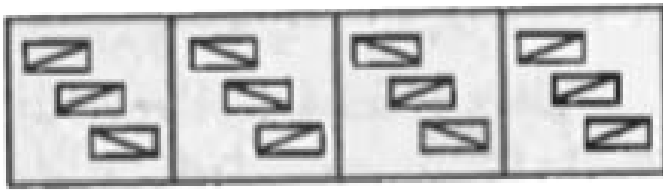
(3)

(4)



[Watch Video Solution](#)

107. Select the one which is different from the other three responses.



(1)

(2)

(3)

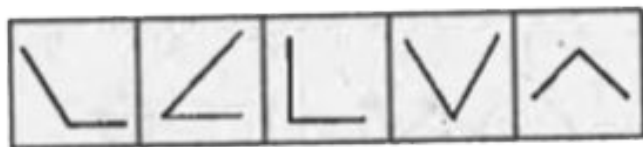
(4)



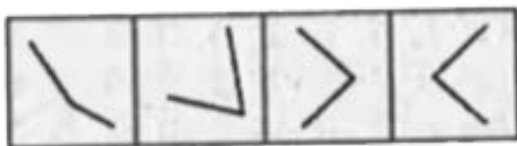
Watch Video Solution

108. A series of figures are given which can be grouped into classes. Select the group into which the figures can be classified from the

given responses.



1 2 3 4 5



6 7 8 9

(1) 1, 6, 9; 2, 4, 7; 3, 5, 8

(2) 1, 6, 9; 3, 4, 7; 2, 5, 8

(3) 2, 6, 9; 1, 4, 3; 5, 7, 8

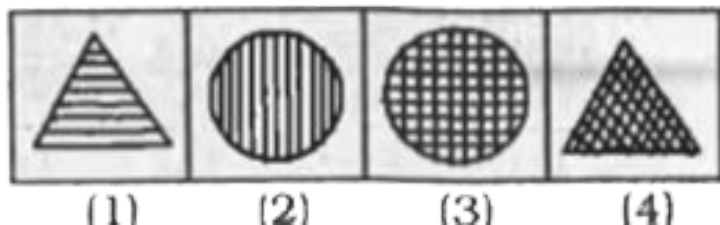
(4) 2, 9, 3; 1, 8, 7; 4, 5, 6



Watch Video Solution

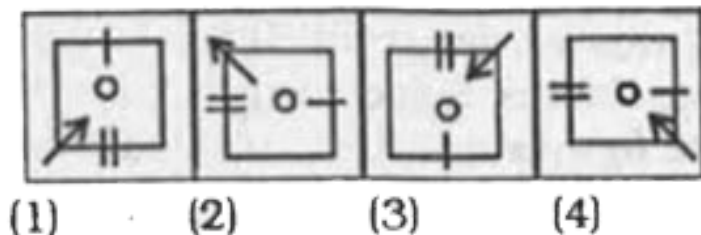
109. In the following question select the one which is different from the other three

responses.



Watch Video Solution

110. In the following question select the one which is different from the other three responses.





Watch Video Solution

111. In the following question select the one which is different from the other three responses.



(1)

(2)

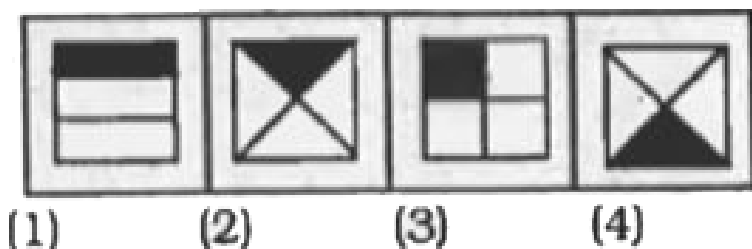
(3)

(4)



Watch Video Solution

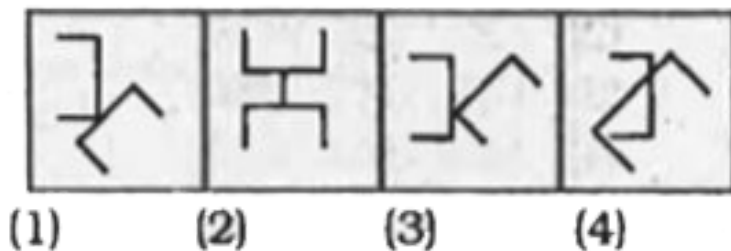
112. In the following question select the one which is different from the other three responses.



Watch Video Solution

113. In the following question select the one which is different from the other three

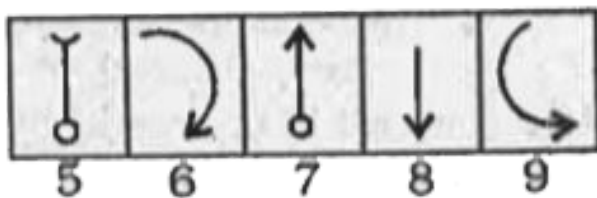
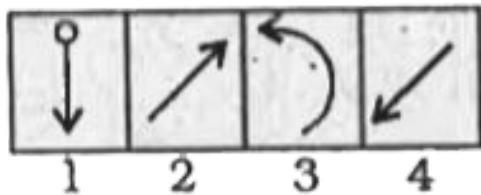
responses.



Watch Video Solution

114. A series of figures are given which can be grouped into classes. Select the group into which the figures can be classified from the

given responses.



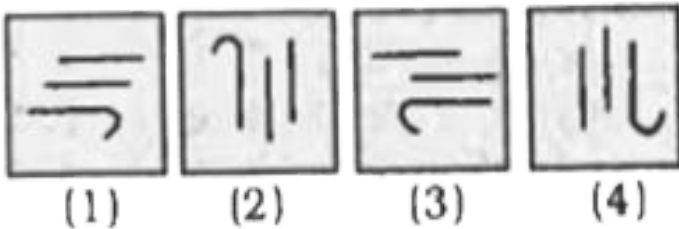
- A. (1, 5, 7)(2, 4, 9)(3, 6, 8)
- B. (1, 5, 8) (2, 4, 9)(3, 6, 7)
- C. (1, 5, 7) (2, 4, 8) (3, 6, 9)
- D. (1, 5, 7) (2, 4, 3) (8, 6, 9)

Answer: C



Watch Video Solution

115. Select the one which is different from the other three responses.



Watch Video Solution

116. Select the one which is different from the other three responses.



(1)



(2)



(3)



(4)




Watch Video Solution


117. Select the one which is different from the other three responses.




(1)



(2)



(3)

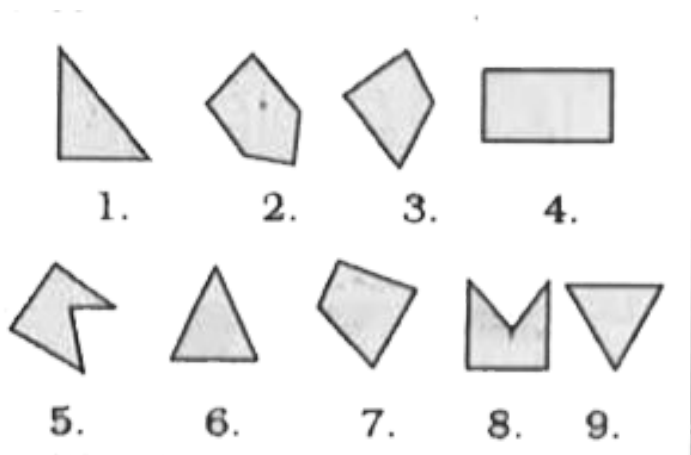


(4)



Watch Video Solution

118. A series of figures are given which can be grouped into classes. Select the group into which the figures can be classified from the given responses.



A. 789, 243, 156

B. 132, 457, 689

C. 168, 347, 259

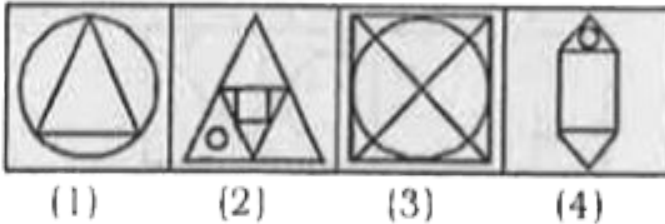
D. 169, 347, 258

Answer: D



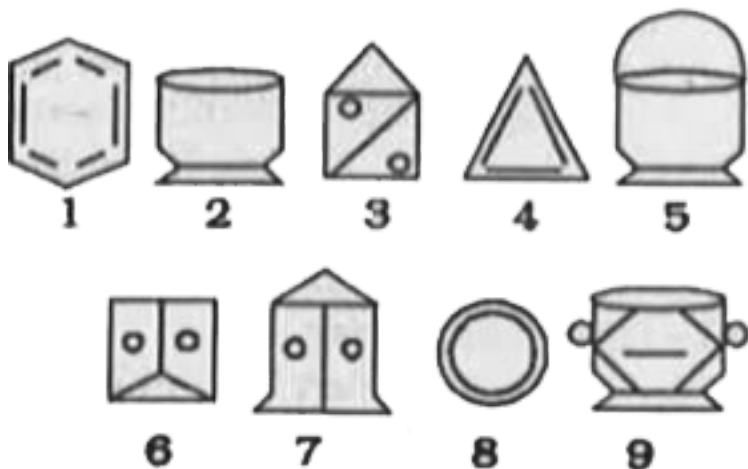
Watch Video Solution

119. Select the one which is different from the other three.





120. A series of figures is given which can be classified into groups. Select from the alternatives one set of groups into which the figures can be classified.



A. 2, 5, 8, 1, 4, 9, 3, 6, 7

B. 1, 4, 8, 2, 5, 9, 3, 6, 7

C. 3, 6, 2, 1, 4, 8, 5, 7, 9

D. 3, 6, 8, 2, 5, 9, 1, 4, 7

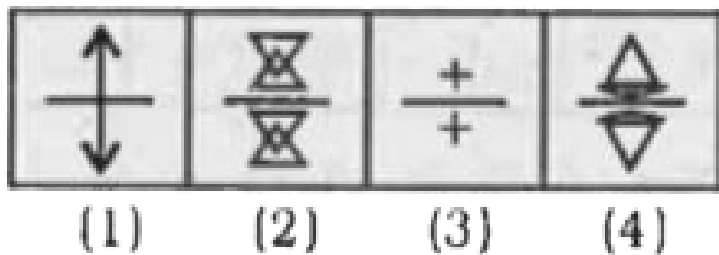
Answer: B



Watch Video Solution

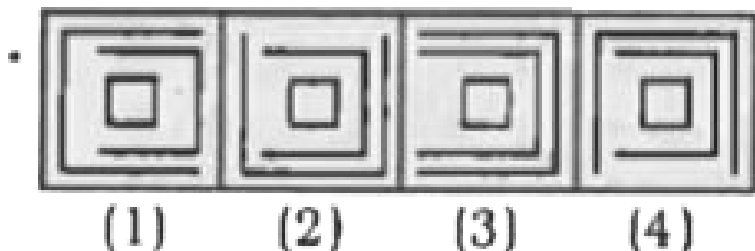
121. In the following question select the one which is different from the other three

responses.



Watch Video Solution

122. In the following question select the one which is different from the other three responses.





Watch Video Solution

123. In the following question select the one which is different from the other three responses.



(1)

(2)

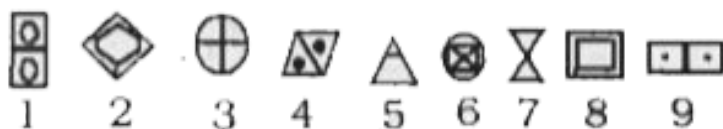
(3)

(4)



Watch Video Solution

124. The following consists of Figures which include a few figures which have similar features, but jumbled up. Identify them to group together. Choose the correct alternative which indicates their number accurately.



- A. (1, 4, 9)(2,6, 8) (3, 5, 7)
- B. (1, 2, 8) (3, 5, 7) (4, 6, 9)
- C. (2, 5, 8), (4, 6, 9), (3, 1, 7)
- D. (1, 4, 9), (2, 7, 8), (3, 5, 6)

Answer: D



Watch Video Solution

125. In a series of figures is given which can be grouped into classes: Select the groups into which the figures can be classified?



1



2



3



4



5



6



7



8



9

A. A. (1, 4, 7) (2, 6, 9) (3, 5, 8)

B. B. (1, 7, 8) (2, 5, 9) (3, 4, 6)

C. C. (1, 4, 8) (2, 6, 9) (3,5, 7)

D. D. (1, 4, 8) (2, 6, 5) (3, 7, 9)


Answer: C



Watch Video Solution

126. In a series of figures is given which can be grouped into classes: Select the groups into

which the figures can be classified?



A. 1, 4, 7, 2, 5, 6, 3, 8, 9

B. 1, 3, 7, 2, 6, 8, 4, 5, 9

C. 1, 4, 7, 2, 6, 8, 3, 5, 9

D. 1, 4, 7, 2, 8, 9, 3, 6, 5

Answer: C




Watch Video Solution


127. In the following question select the one which is different from the other three responses.




(1)



(2)



(3)



(4)



Watch Video Solution

128. A series of figures are given which can be grouped into classes. Select the group into which the figures can be classified from the given responses.



(1)



(2)



(3)



(4)



(5)



(6)



(7)



(8)

A. [1, 7, 2, 4, 3, 5, 6, 8]

B. [1, 4, 2, 7, 3, 5, 6, 8]

C. [1, 3, 2, 7, 6, 8, 4, 5]


D. [1, 4, 3, 6, 3, 5, 7, 8]

Answer: B

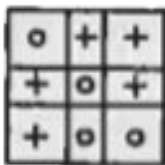


Watch Video Solution

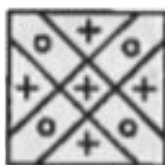
129. Select the one which is different from the other three responses.



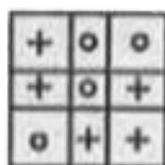
(1)



(2)



(3)




(4)



Watch Video Solution

130. A series of figures is given which can be grouped into classes. Select the group into which the figures can be classified from the given responses :



A. 1, 5, 7, 2, 4, 9, 3, 6, 8

B. 1, 5, 7, 2, 8, 9, 3, 4, 6

C. 1, 7, 8, 2, 4, 9, 3, 5, 6

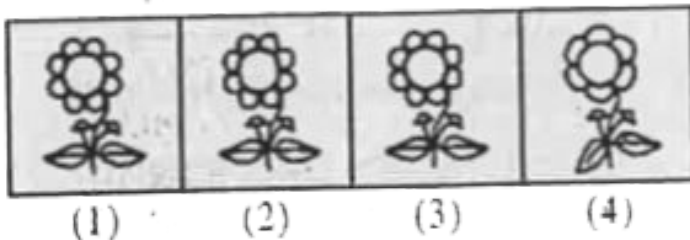
D. 1, 4, 6, 5, 8, 9, 2, 3, 7

Answer: A



Watch Video Solution

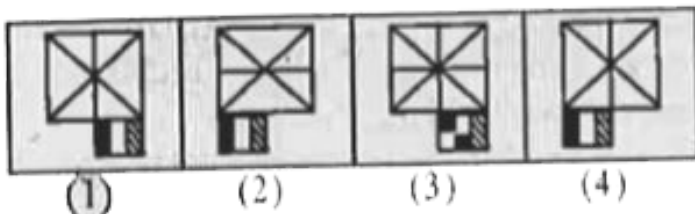
131. Select the one which is different from the other three responses.





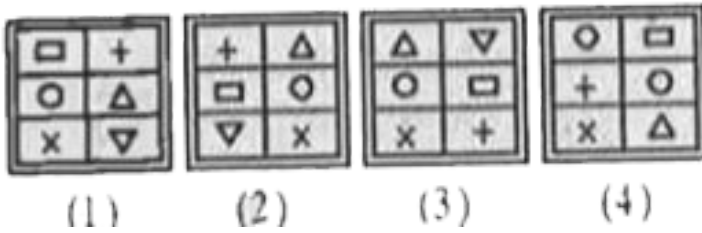
Watch Video Solution

132. Select the one which is different from the other three responses.



Watch Video Solution

133. Select the one which is different from the other three responses.



Watch Video Solution

134. A series of figures is given which can be grouped into classes. Select the group into which the figures can be classified from th

given responses :



(1)



(2)



(3)



(4)



(5)




(6)



(7)



(8)



(9)

A. 3, 5, 2, 1, 4, 6, 7, 8, 9

B. 3, 4, 1, 5, 7, 9, 2, 8, 6

C. 1, 4, 9, 3, 6, 8, 2, 5, 7

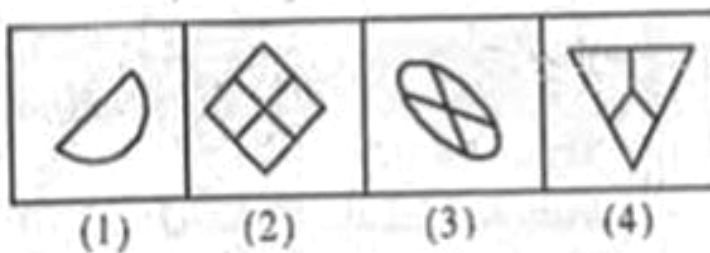
D. 8, 5, 4, 3, 2, 1, 7, 6, 9

Answer: C



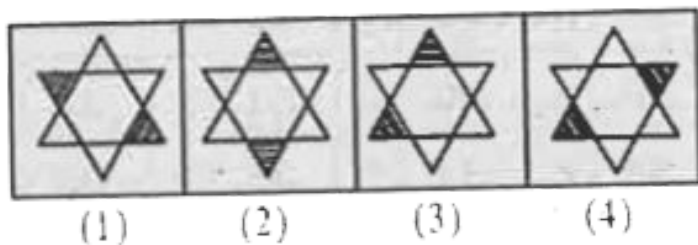
Watch Video Solution

135. Find the odd figure from the given alternative.



Watch Video Solution

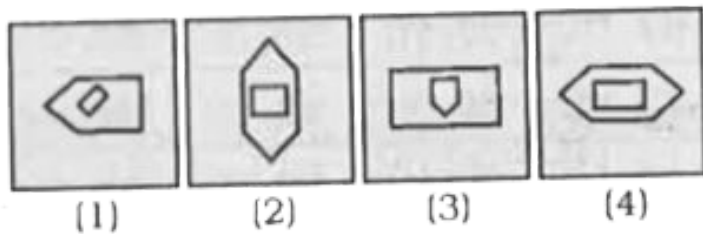
136. Find the odd figure from the given alternative.



Watch Video Solution


137. In the following question, select the one which is different from the other three

responsess.



Watch Video Solution

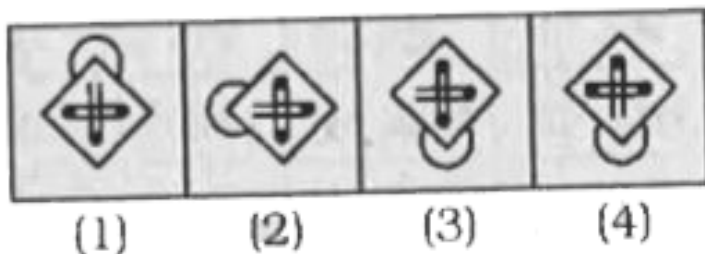
138. In the following question, select the one which is different from the other three responsess.





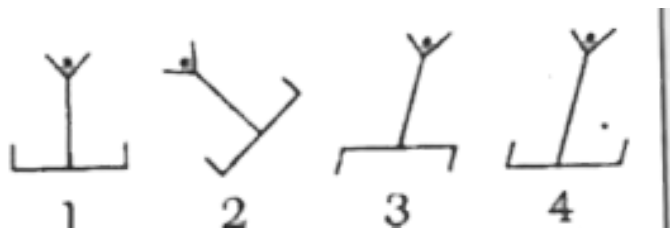
Watch Video Solution

139. Find the odd figure from the given alternatives.



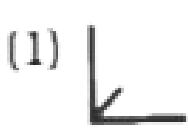
Watch Video Solution

140. Find the odd figure from the given alternatives.




Watch Video Solution

141. Find the odd figure from the given alternatives.



Watch Video Solution

142. In the following question, find the odd figure from the given alternatives.



(1)

(2)

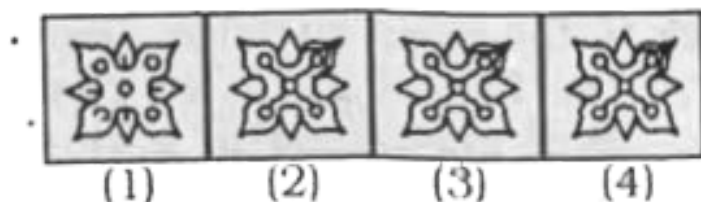
(3)

(4)



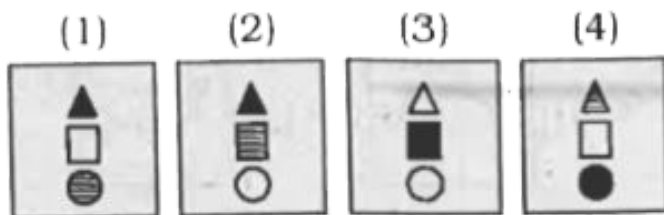
Watch Video Solution

143. In the following question, find the odd figure from the given alternatives.



Watch Video Solution

144. Find the odd one out.



A. 4

B. 1

C. 2

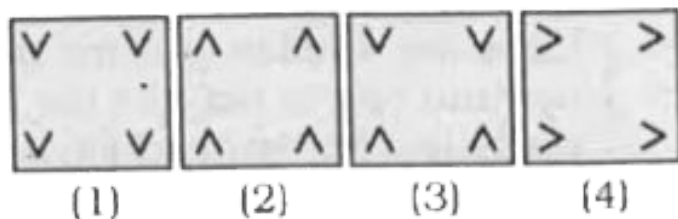
D. 3

Answer: D



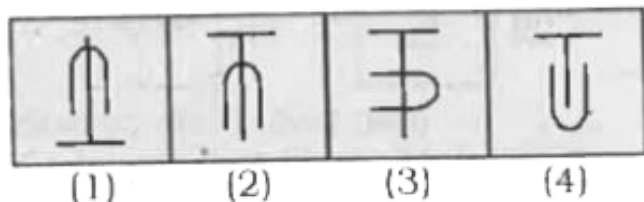
Watch Video Solution

145. Which figure is different from the rest?



Watch Video Solution


146. Select the figure which is different from the rest.



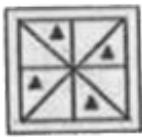


Watch Video Solution

147. In the following question, find the odd word / letters / number pair / figure from the given alternatives.



(1)



(2)



(3)



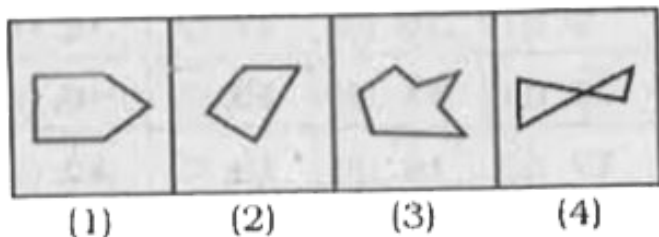
(4)



Watch Video Solution

148. In the following question, find the odd word / letters / number pair / figure from the

given alternatives.

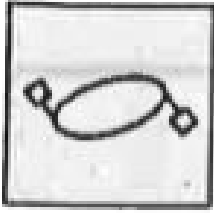


Watch Video Solution

149. In the given question, there are four figures given out of which three are similar in some manner and one is not like the others. Select the figure

which is odd one out.

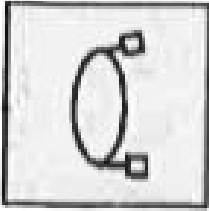
(1)




(2)



(3)




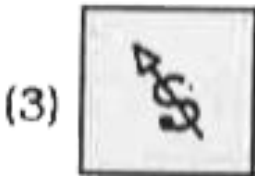
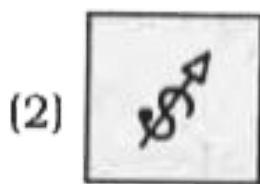

(4)



Watch Video Solution

150. In the given question, there are four figures given out of which three are similar in some manner and one is not like the others.

Select the figure which is odd one out.



[Watch Video Solution](#)

151. In the given question, there are four figures given out of which three are similar in some manner and one is not like the others.

Select the figure which is odd one out.

(1)



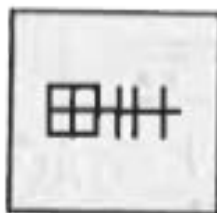
(2)



(3)



(4)



Watch Video Solution