


REASONING

BOOKS - KIRAN PUBLICATION

SERIES

MULTIPLE CHOICE QUESTIONS


1. Complete the series of figure ,by selecting correct answer figure from the given responses.



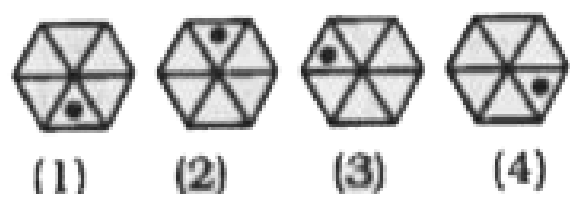
Watch Video Solution

2. Complete the series of figures, by selecting correct answer figure from the given responses.

Question Figures :



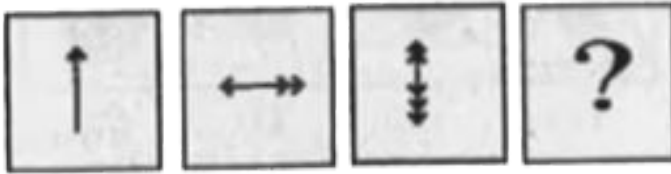
Answer Figures :



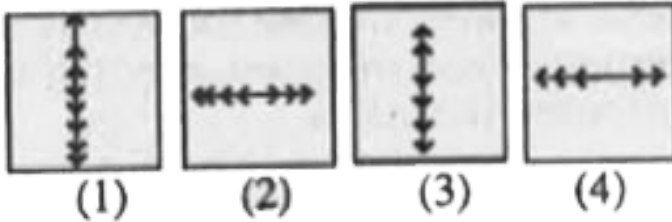
Watch Video Solution

3. Find the missing figure in the series from the given answer figures.

Question Figures :



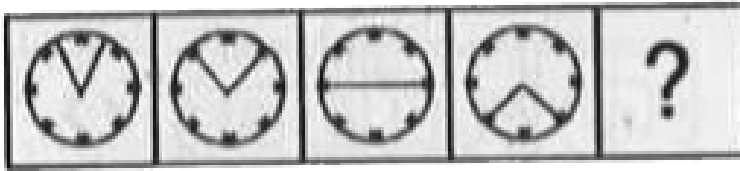
Answer Figures :




Watch Video Solution

4. Find the missing figure in the series from the given answer figures.

Question Figures :



Answer Figures :



(1)

(2)

(3)

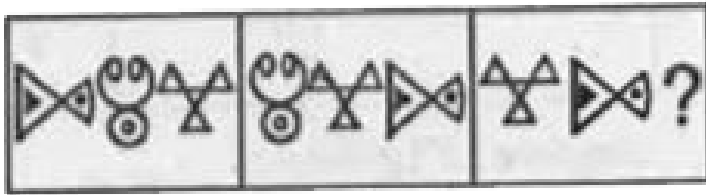
(4)




Watch Video Solution

5. Find the missing figure in the series from the given answer figures.

Question Figures :



Answer Figures :



(1)

(2)

(3)

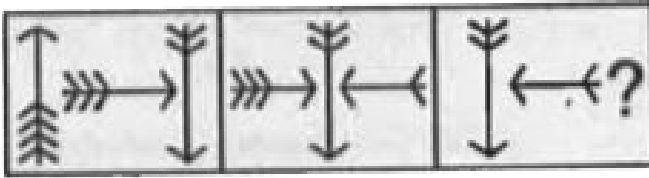
(4)



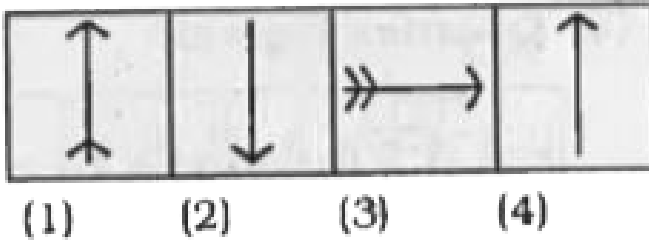
Watch Video Solution

6. Find the missing figure in the series from the given answer figures.

Question Figures :




Answer Figures :



Watch Video Solution

7. Find the missing figure of the series from the given answer figures.

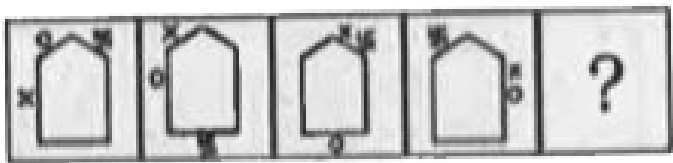
Questions Figures



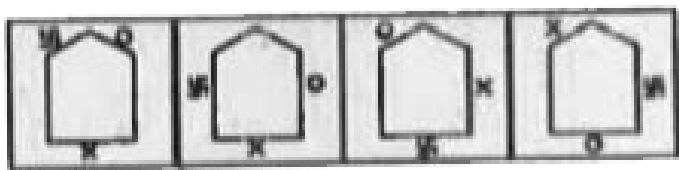
Watch Video Solution

8. Find the missing figure in the series from the given answer figures.

Question Figures :



Answer Figures :



(1)

(2)

(3)

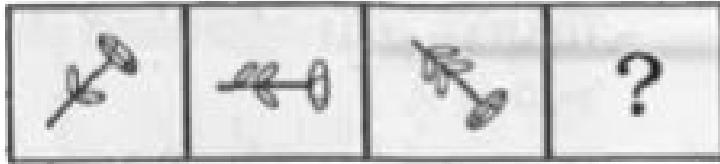
(4)



Watch Video Solution

9. Find the missing figure in the series from the given answer figures.

Question Figures :



Answer Figures :



(1)

(2)

(3)

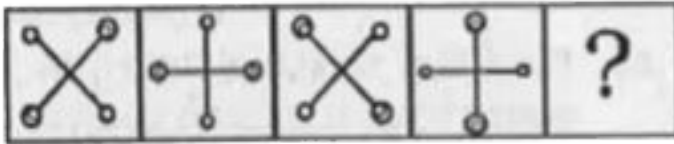
(4)



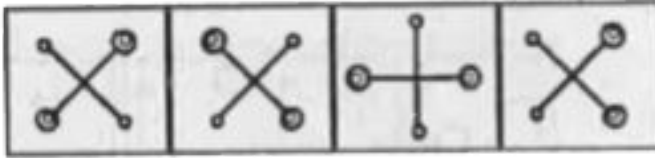
Watch Video Solution

10. Find the missing figure in the series from the given answer figures.

Question Figures :



Answer Figures :



(1)

(2)

(3)

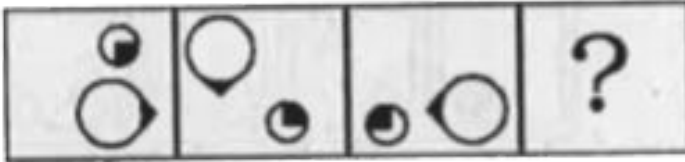
(4)



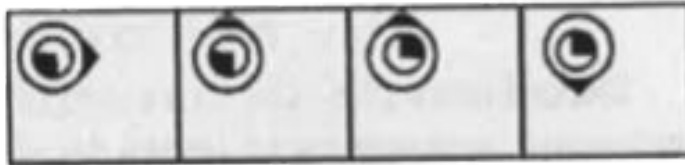
Watch Video Solution

11. Find the missing figure in the series from the given answer figures.

Question Figures :



Answer Figures :



(1)

(2)

(3)

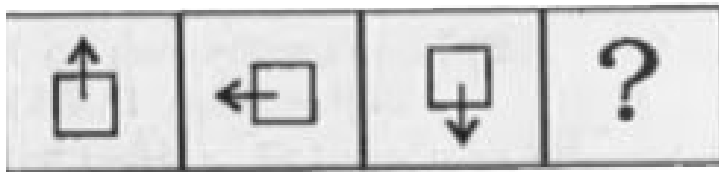
(4)



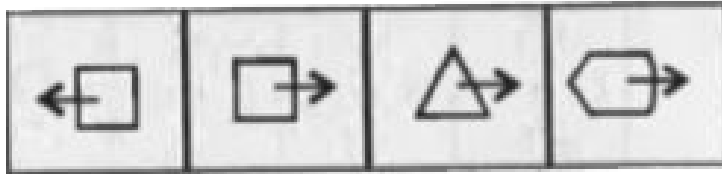
Watch Video Solution

12. Find the missing figure in the series from the given answer figures.

. **Question Figures :**



Answer Figures :



(1)

(2)

(3)

(4)




Watch Video Solution

13. Find the missing figure in the series from the given answer figures.

Question Figures :



Answer Figures :



(1)

(2)

(3)

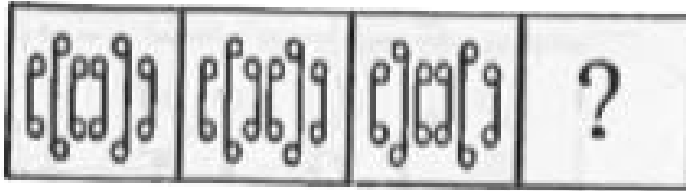
(4)



Watch Video Solution

14. Which of the following answer figures can complete the given series?

Question Figures :



Answer Figures :



(1)

(2)

(3)

(4)

A. (a) Figure 1

B. (b) Figure 2

C. (c) Figure 3

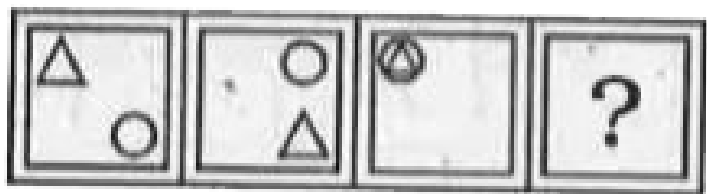
D. (d) Figure 4



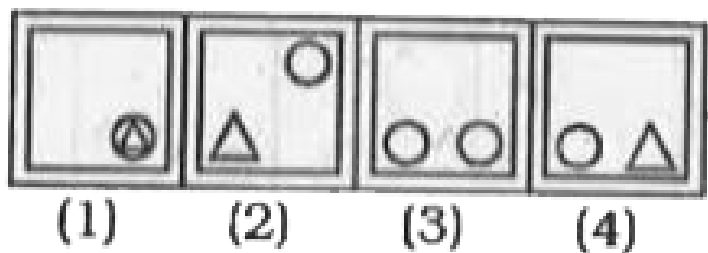
Watch Video Solution

15. Find the missing figure in the series from the given answer figures.

Question Figures :



Answer Figures :

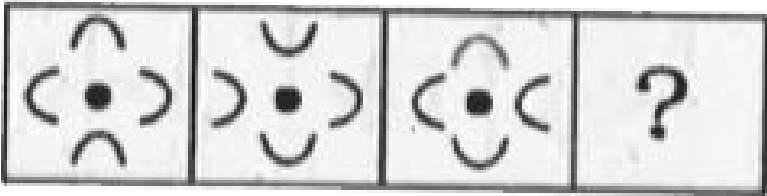


Watch Video Solution

16. In each of the following questions a series is given with one term missing. Choose the correct alternative from the given

ones that will complete the series.

Question Figures :



Answer Figures :

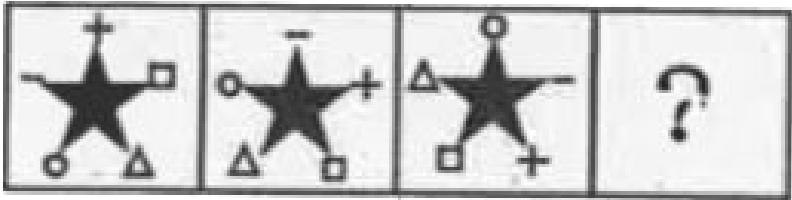


Watch Video Solution

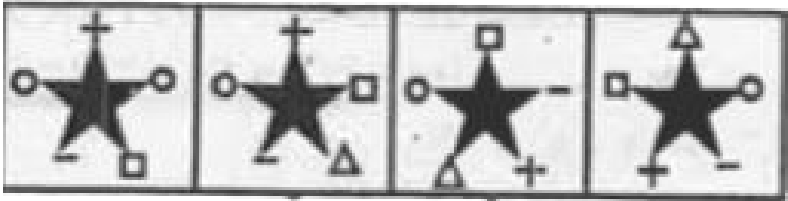
17. In each of the following questions a series is given with one term missing. Choose the correct alternative from the given

ones that will complete the series.

Question Figures :



Answer Figures :



(1)

(2)

(3)

(4)

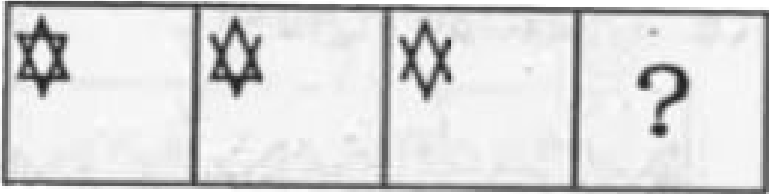


Watch Video Solution

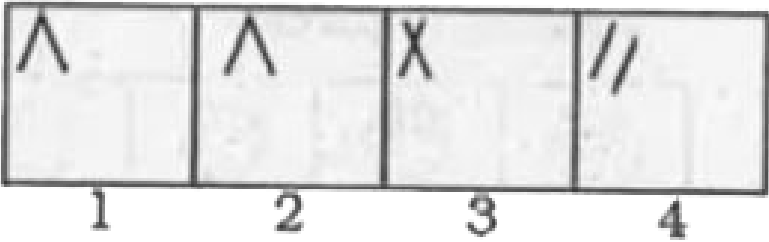
18. In each of the following questions a series is given with one term missing. Choose the correct alternative from the given

ones that will complete the series.

Question Figures :




Answer Figures :




Watch Video Solution

19. In following questions, find the missing figure of the series from the given answer figures.

Question Figures :



Answer Figures :



(1)

(2)

(3)

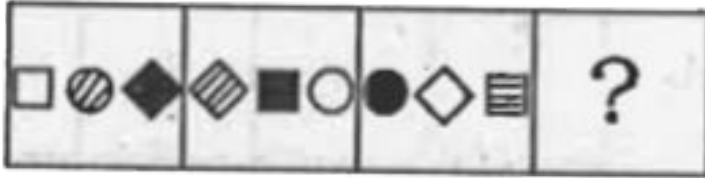
(4)




Watch Video Solution

20. In following questions, find the missing figure of the series from the given answer figures.

Question Figures :



Answer Figures :



(1)

(2)

(3)

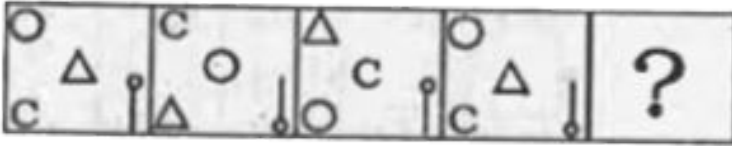
(4)



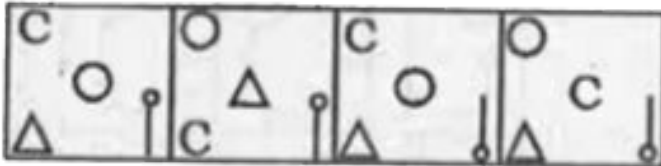
Watch Video Solution

21. In following questions, find the missing figure of the series from the given answer figures.

Question Figures :



Answer Figures :



(1)

(2)

(3)

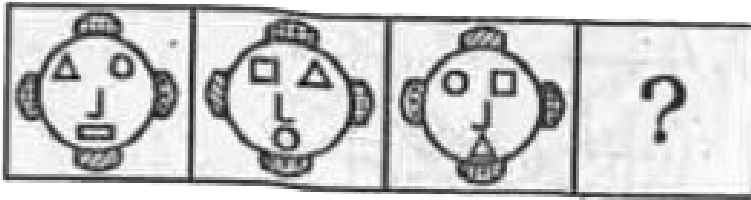
(4)




Watch Video Solution

22. In following questions, find the missing figure of the series from the given answer figures.

Question Figures :



Answer Figures :



(1)

(2)

(3)

(4)

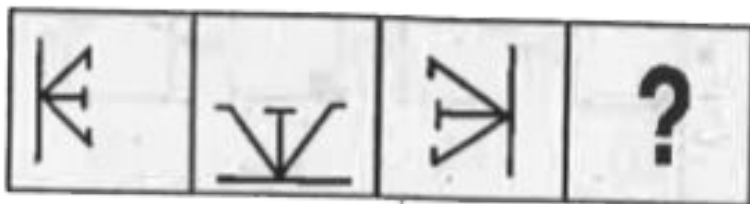


Watch Video Solution

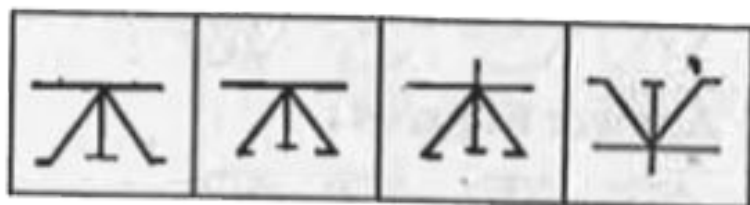
23. In following questions, a series is given with one term missing. Choose the correct alternative from the given ones that

will complete the series.

Question Figures :



Answer Figures :



(1)

(2)

(3)

(4)




Watch Video Solution

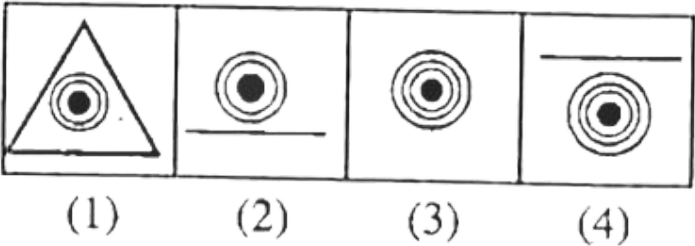
24. In following questions, a series is given with one term missing. Choose the correct alternative from the given ones that

will complete the series.

Question Figures :



Answer Figures :

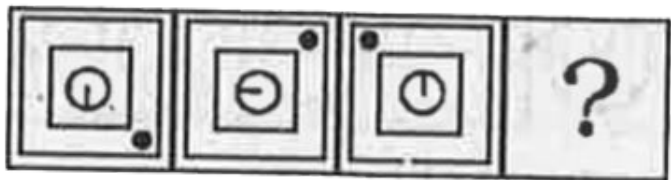


Watch Video Solution

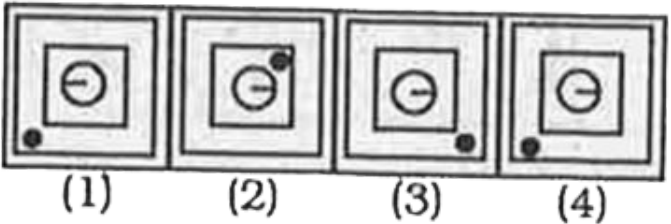
25. In following questions, a series is given with one term missing. Choose the correct alternative from the given ones that

will complete the series.

Question Figures :



Answer Figures :

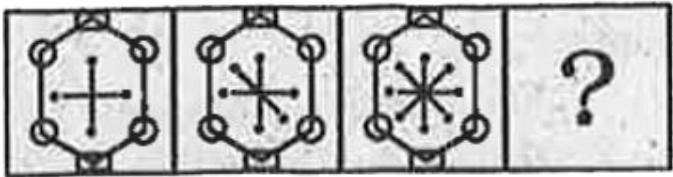


Watch Video Solution

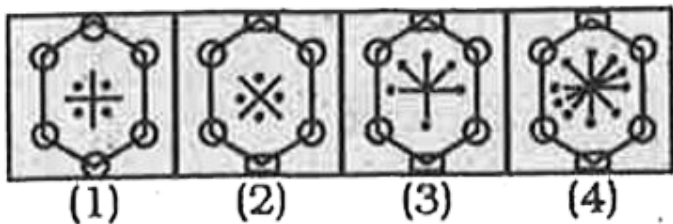
26. In following questions, a series is given with one term missing. Choose the correct alternative from the given ones that

will complete the series.

Question Figures :



Answer Figures :

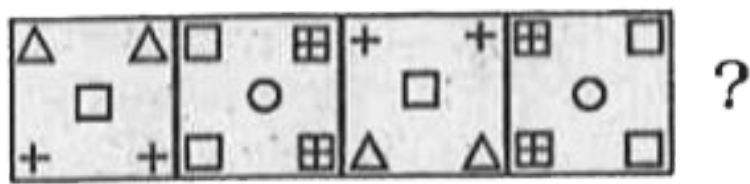


Watch Video Solution

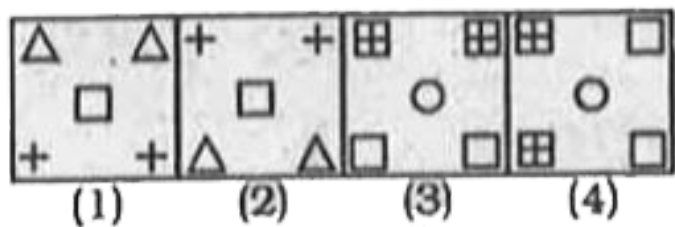
27. In following questions, a series is given with one term missing. Choose the correct alternative from the given ones that

will complete the series.

Question Figures :



Answer Figures :




 [Watch Video Solution](#)

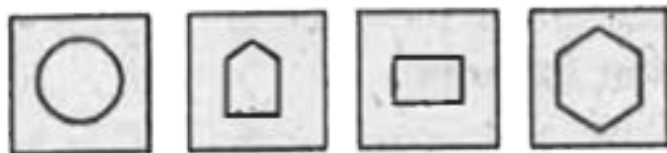
28. In following questions, a series is given with one term missing. Choose the correct alternative from the given ones that

will complete the series.

Question Figures :



Answer Figures :



(1)

(2)

(3)

(4)




Watch Video Solution

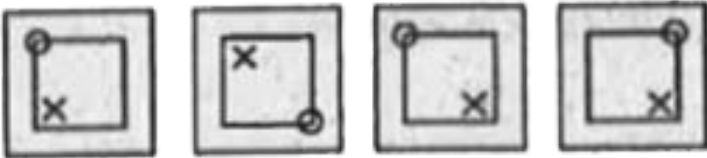
29. In following questions, a series is given with one term missing. Choose the correct alternative from the given ones that

will complete the series.

Question Figures :



Answer Figures :



(1)

(2)

(3)

(4)



Watch Video Solution

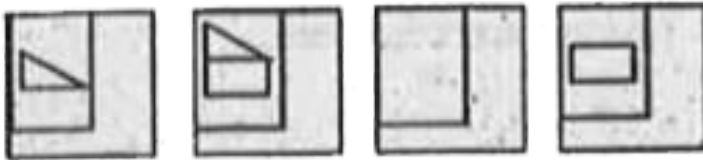
30. In following questions, a series is given with one term missing. Choose the correct alternative from the given ones that

will complete the series.

Question Figures :



Answer Figures :



(1)

(2)

(3)

(4)

A. (a) 1

B. (b) 2

C. (c) 3


D. (d) 4



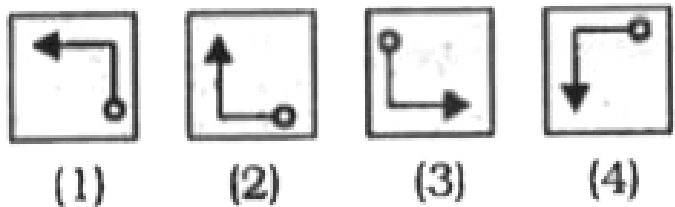
Watch Video Solution

31. In the following questions, a series is given with one term missing. Choose the correct alternative from the given ones that will complete the series.

Question Figures :



Answer Figures :




Watch Video Solution


32. In the following questions, a series is given with one term missing. Choose the correct alternative from the given ones that

will complete the series.

Question Figures :



Answer Figures :



(1)

(2)

(3)

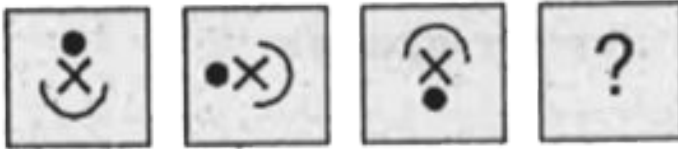
(4)



Watch Video Solution

33. Find the missing figure in the series from the given answer figures.

33. Question Figures :




Answer Figures :



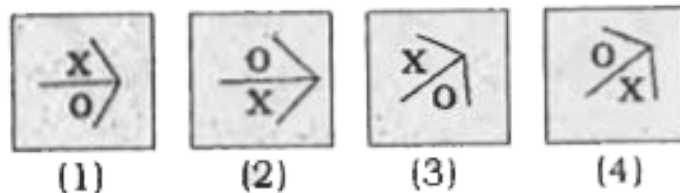
Watch Video Solution

34. Find the missing figure in the series from the given answer figures.

Question Figures :



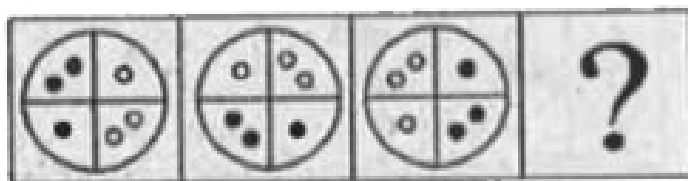
Answer Figures :



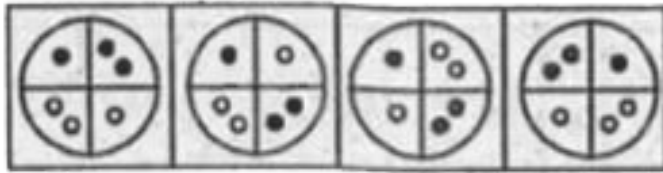
[▶ Watch Video Solution](#)

35. Find the missing figure from the given responses.

Question Figures :



Answer Figures :



(1)

(2)

(3)


(4)



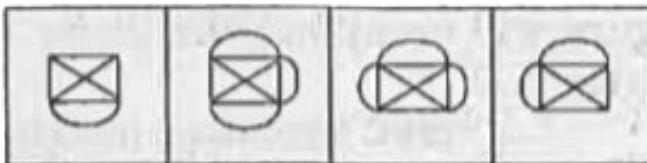
Watch Video Solution

36. Find the missing figure from the given responses.

Question Figures :



Answer Figures :



(1)

(2)

(3)


(4)



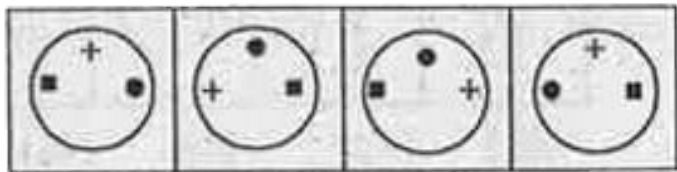
Watch Video Solution

37. Find the missing figure from the given responses.

Question Figures :



Answer Figures :



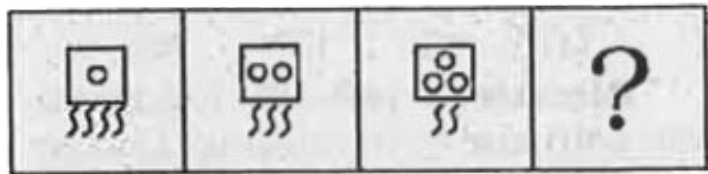
(1) (2) (3) (4)



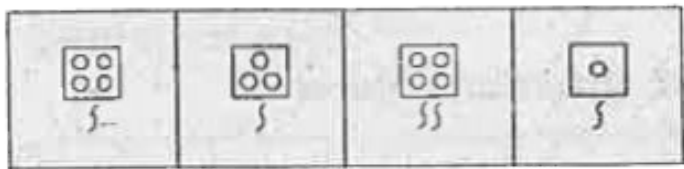
Watch Video Solution

38. Find the missing figure from the given responses.

Question Figures :



Answer Figures :



(1)

(2)

(3)

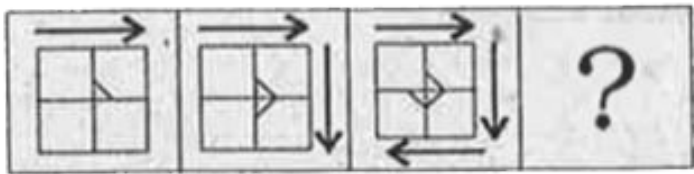
(4)



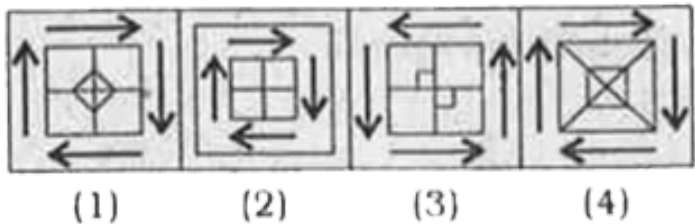
Watch Video Solution

39. Find the missing figure from the given responses.

Question Figures :



Answer Figures :



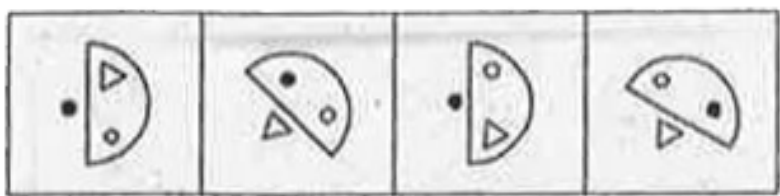
Watch Video Solution

40. Find the missing figure from the given responses.

Question Figures :



Answer Figures :



(1)

(2)

(3)


(4)



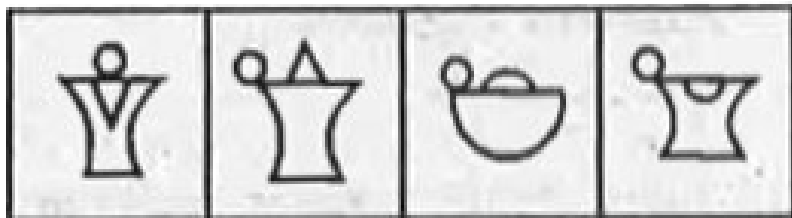
Watch Video Solution

41. Which option- figure will complete the given figure series?

Question Figures :



Answer Figures :



(1)

(2)

(3)

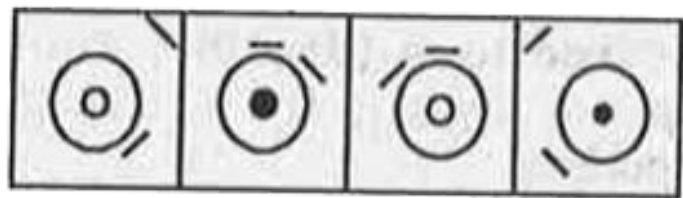
(4)



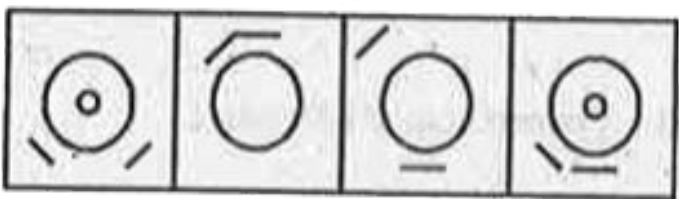
Watch Video Solution

42. Which option- figure will complete the given figure series?

Question Figures :



Answer Figures :



(1)

(2)

(3)

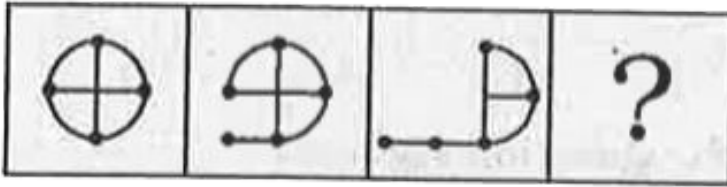
(4)



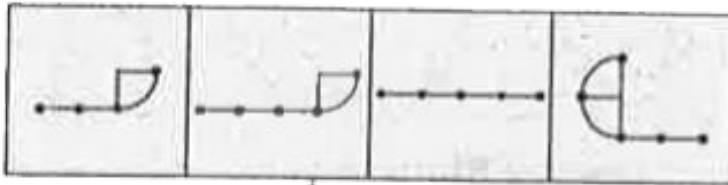
Watch Video Solution

43. A series is given with one term missing. Choose the correct alternative from the given ones that will complete the series.

Question Figures :



Answer Figures :



(1)

(2)

(3)

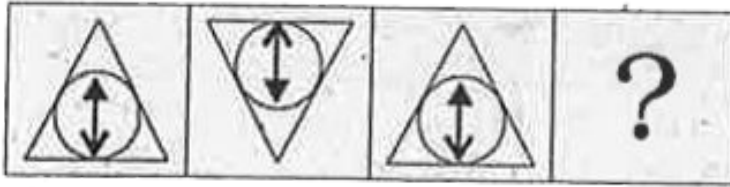
(4)



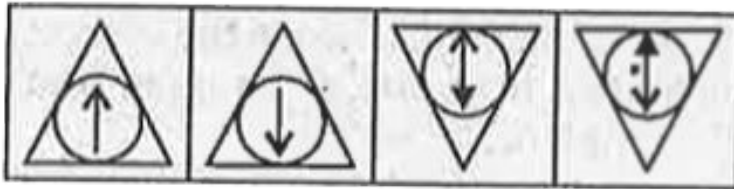
Watch Video Solution

44. A series is given with one term missing. Choose the correct alternative from the given ones that will complete the series.

Question Figures :



Answer Figures :



(1)

(2)

(3)

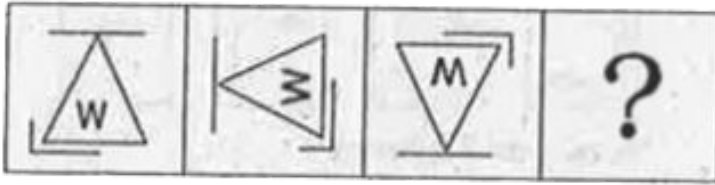
(4)



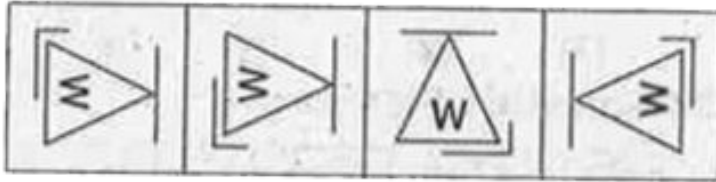
Watch Video Solution

45. A series is given with one term missing. Choose the correct alternative from the given ones that will complete the series.

Question Figures :



Answer Figures :



(1)

(2)

(3)

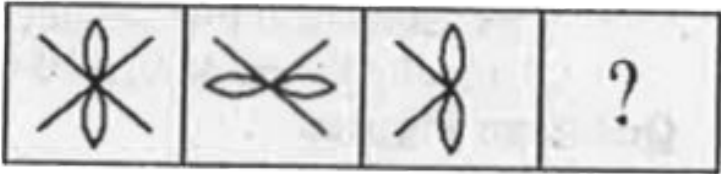
(4)



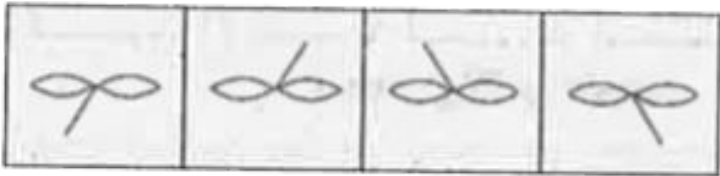
Watch Video Solution

46. Select the missing figure from the given responses.

Question Figures :



Answer Figures :



(1)

(2)

(3)

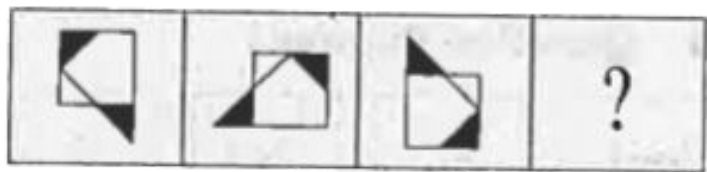
(4)



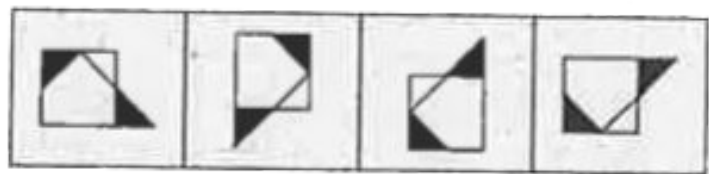
Watch Video Solution

47. Select the missing figure from the given responses.

Question Figures :



Answer Figures :



(1)

(2)

(3)

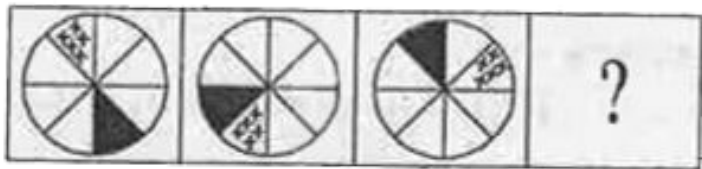
(4)



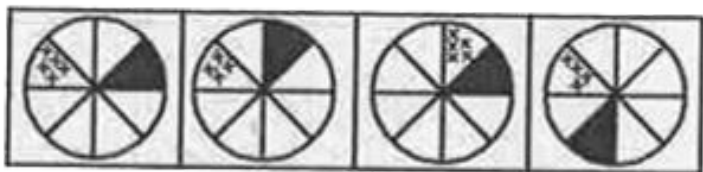
[Watch Video Solution](#)

48. Select the missing figure from the given responses.

Question Figures :



Answers Figures :



(1)

(2)

(4)

(5)

A. (a) 1

B. (b) 2

C. (c) 3

D. (d) 4



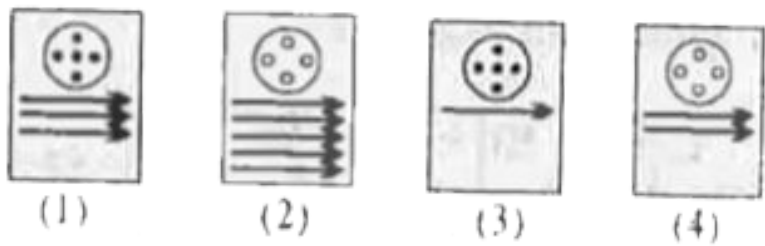
Watch Video Solution

49. Find the missing figure from the given responses.

Question Figures :




Answer Figures :



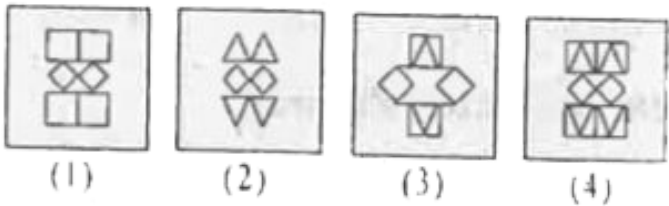
Watch Video Solution

50. Find the missing figure from the given responses.

Question Figures :



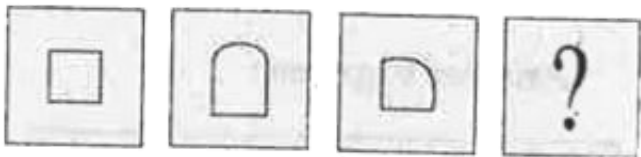
Answer Figures :



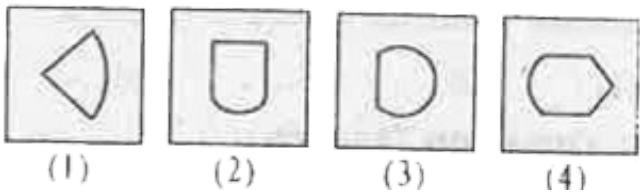
Watch Video Solution

51. Find the missing figure from the given responses.

Question Figures :




Answer Figures :



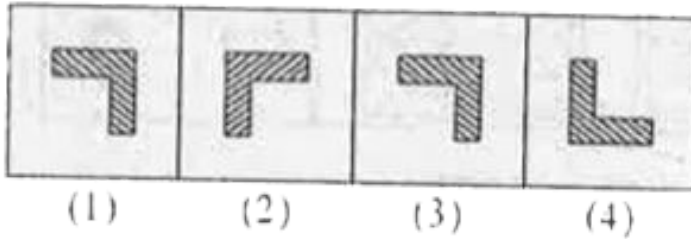
Watch Video Solution

52. In each of the following questions, find the missing figure from the given responses.

Question Figures :



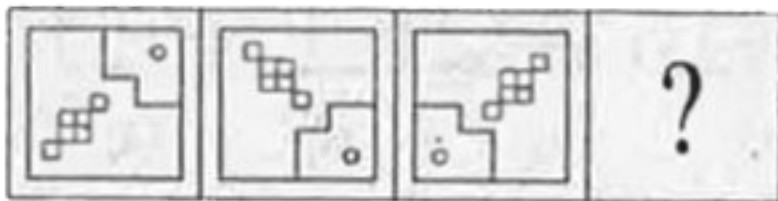
Answer Figures :



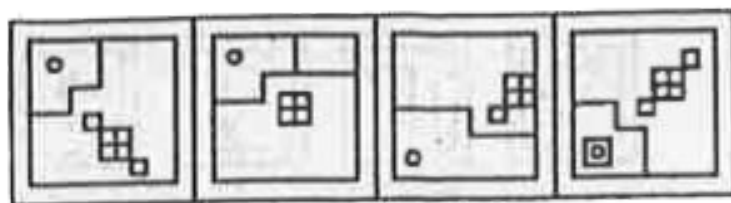
Watch Video Solution

53. In each of the following questions, find the missing figure from the given responses.

Question Figures :



Answer Figures :



(1)

(2)

(3)

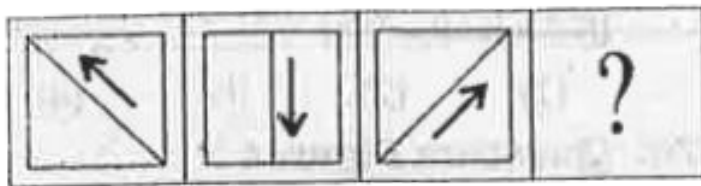
(4)




Watch Video Solution

54. In each of the following questions, find the missing figure from the given responses.

Question Figures :



Answer Figures :



(1)

(2)

(3)


(4)




Watch Video Solution

55. In the following questions, find the missing figure from the given responses.

Question Figures :



Answer Figures :



(1)

(2)

(3)


(4)





Watch Video Solution

56. In the following questions, find the missing figure from the given responses.

. Question Figures :



Answer Figures :



(1)

(2)

(3)

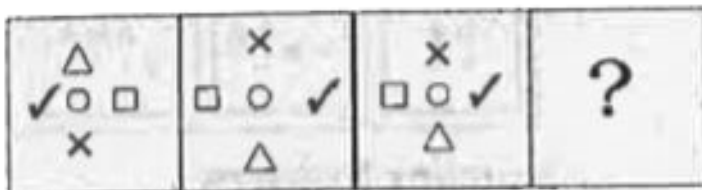
(4)



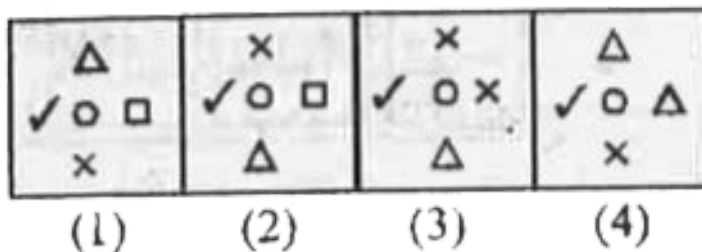
Watch Video Solution

57. In each of the following questions, find the missing figure from the given responses.

Question Figures :



Answer Figures :



A. (1)

B. (2)

C. (3)

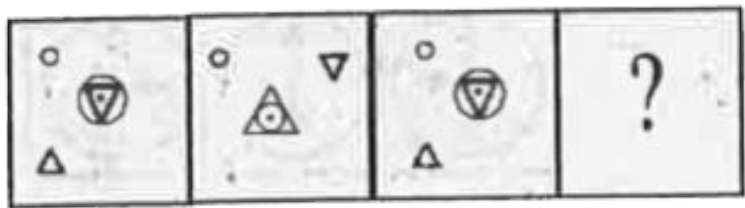
D. (4)



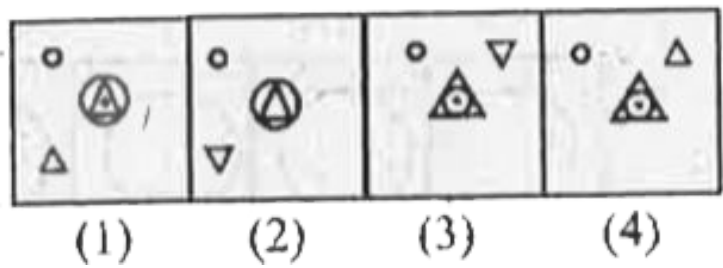
Watch Video Solution

58. In each of the fqllovmg questions, find the missing figure from the gtven responses.

Question Figures :



Answer Figures :



 [Watch Video Solution](#)


59. In each of the following questions a series is given, with one term missing. Choose the correct alternatives from the given

ones that will complete the series.

Question Figures :



Answer Figures :



(1)

(2)

(3)

(4)



Watch Video Solution

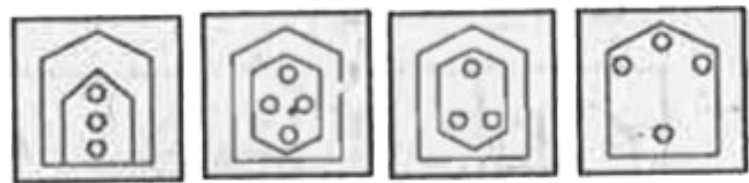
60. In each of the following questions a series is given, with one term missing. Choose the correct alternatives from the given

ones that will complete the series.

Question Figures :



Answer Figures :



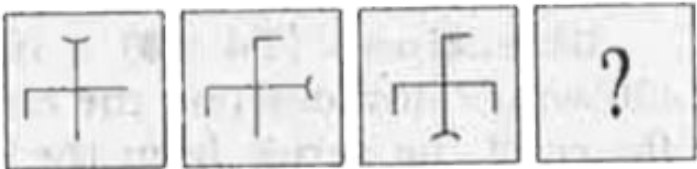
(1) (2) (3) (4)



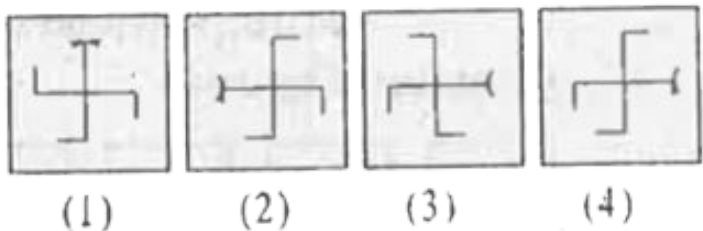
Watch Video Solution

61. Find the missing figure from the given responses.

Problem Figures :




Answer Figures :

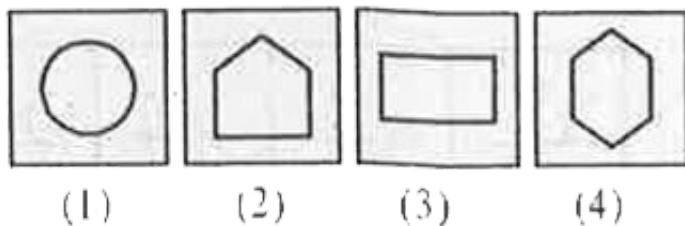


Watch Video Solution

62. Find the missing figure from the given responses.



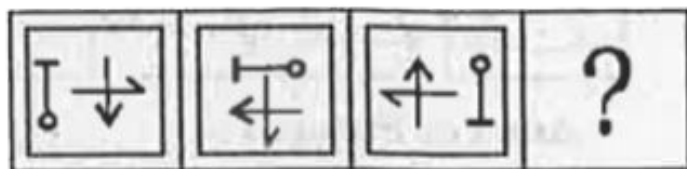
Answer Figures :



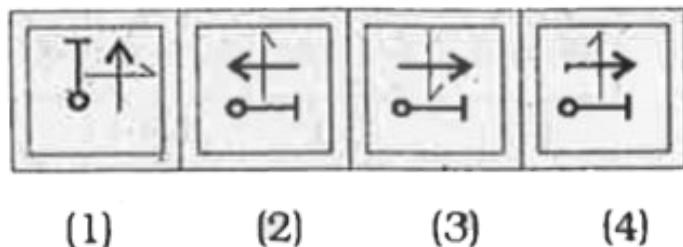
 [Watch Video Solution](#)

63. In the following questions, find the missing figure from the given responses.

Question Figures :



Answer Figures :

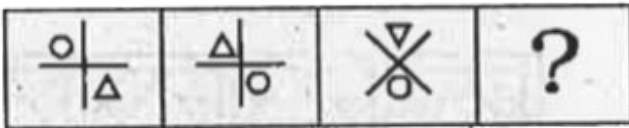




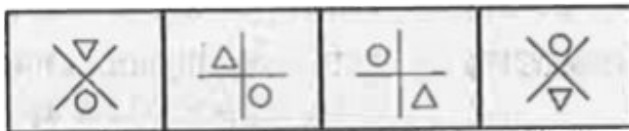
Watch Video Solution

64. In each of the following questions find the missing figure from the given responses.

Question Figures :



Answer Figures :



(1)

(2)

(3)

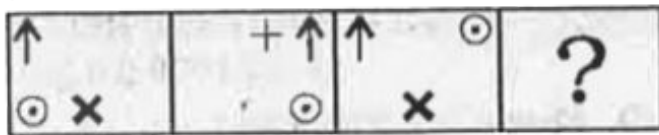
(4)



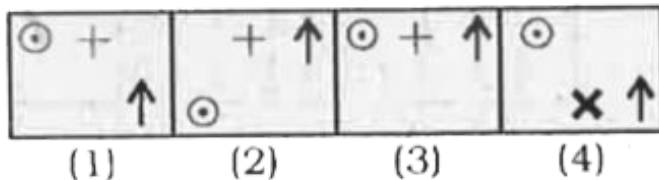
Watch Video Solution

65. In each of the following questions find the missing figure from the given responses.

Question Figures :

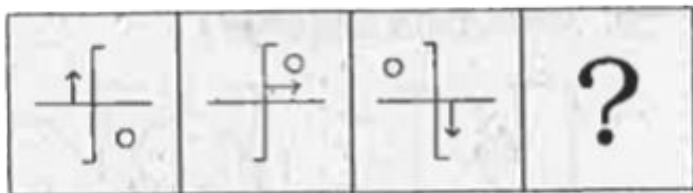


Answer Figures :

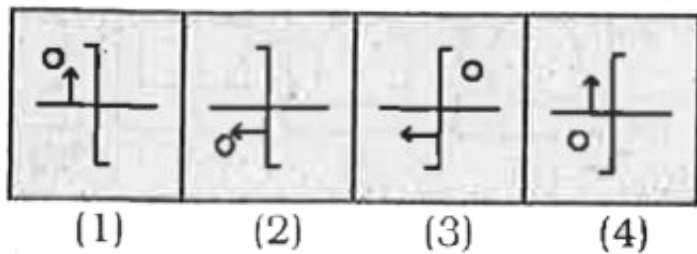


Watch Video Solution

66. In each of the following questions find the missing figure from the given responses.



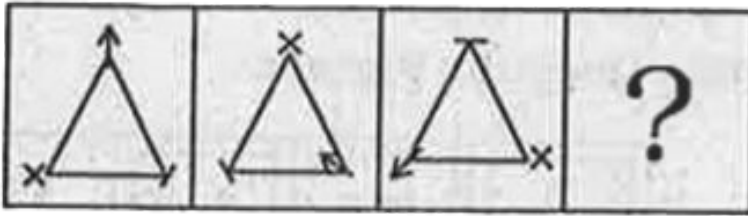
Answer Figures :



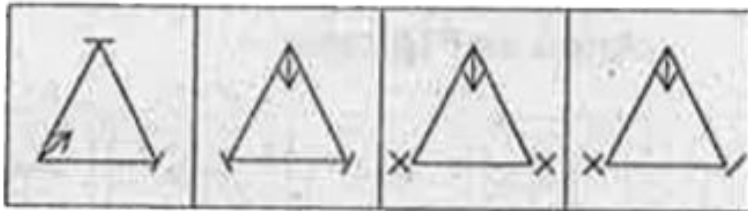
Watch Video Solution

67. In each of the following questions find the missing figure from the given responses.

Questions Figures :



Answer Figures :



(1)

(2)

(3)

(4)

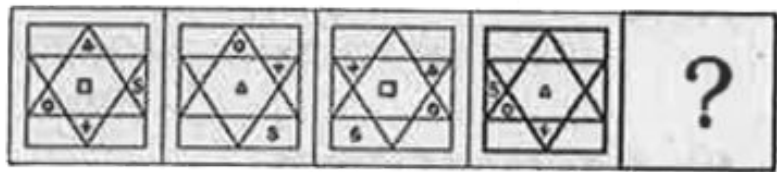


Watch Video Solution

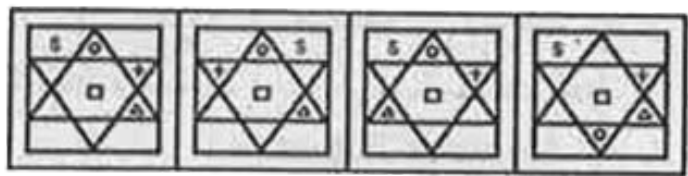
68. In each of the following questions, a series is given, with one term missing. Choose the correct alternative from the given

ones that will complete the series

Question Figures :



Answer Figures :



(1)

(2)

(3)

(4)



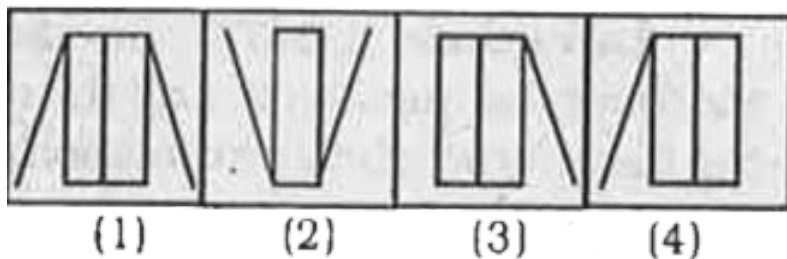
Watch Video Solution

69. In each the following questions find the missing of the series from the given answer figures.

Question Figures :



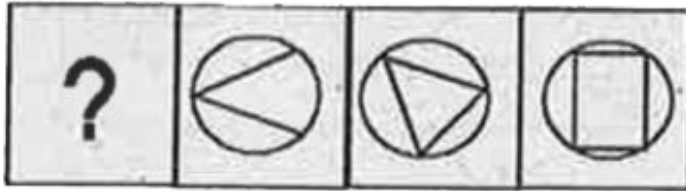
Answer Figures :



Watch Video Solution

70. In each the following questions find the missing of the series from the given answer figures.

Question Figures :



Answer Figures :



(1)

(2)

(3)

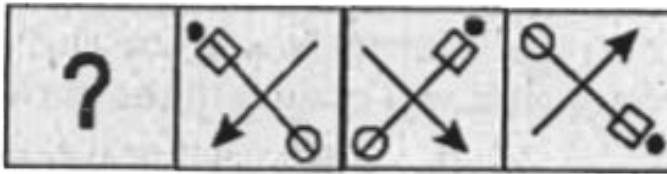
(4)



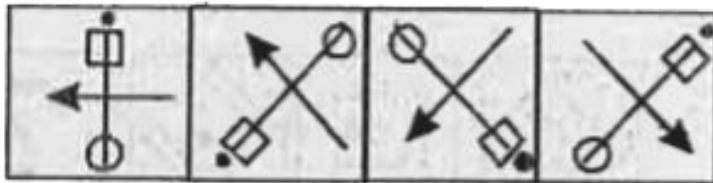
Watch Video Solution

71. In each the following questions find the missing of the series from the given answer figures.

Question Figures :



Answer Figures :



(1)

(2)

(3)

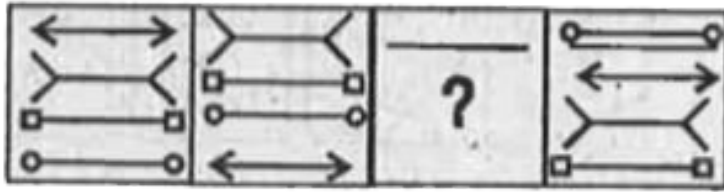
(4)



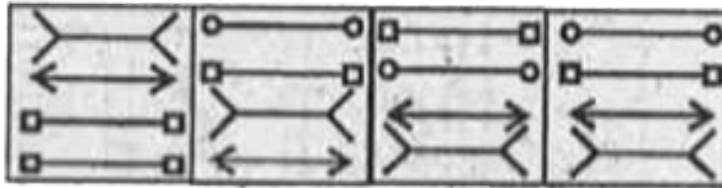
Watch Video Solution

72. In each the following questions find the missing of the series from the given answer figures.

Question Figures :



Answer Figures :



(1)

(2)

(3)

(4)

A. (a) 1

B. (b) 2

C. (c) 3

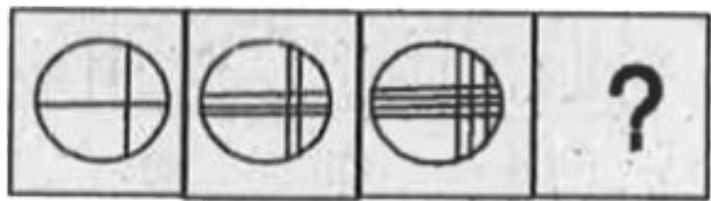
D. (d) 4



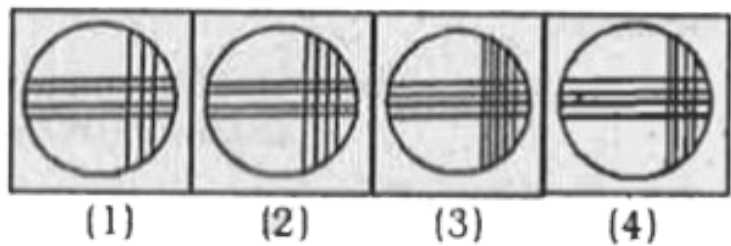
Watch Video Solution

73. In each the following questions find the missing of the series from the given answer figures.

Question Figures :



Answer Figures :




 [Watch Video Solution](#)

74. In the following questions find the missing figure of the series from the given answer figures.

Question Figures :



Answer Figures :



(1)

(2)

(3)

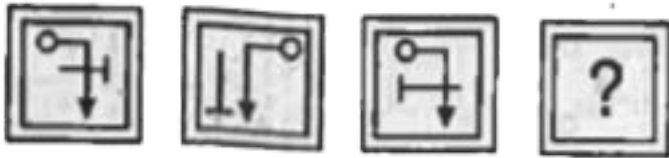
(4)



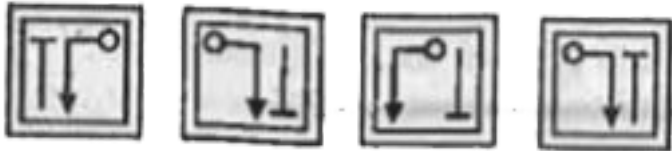
[Watch Video Solution](#)

75. In the following questions find the missing figure of the series from the given answer figures.

Question Figures :



Answer Figures :



(1)

(2)

(3)

(4)

A. (1)

B. (2)

C. (3)


D. (4)



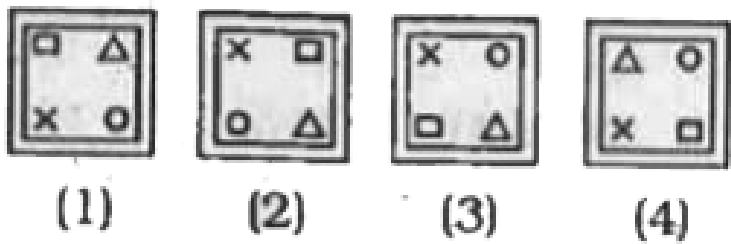
Watch Video Solution

76. In the following questions find the missing figure of the series from the given answer figures.

Question Figures :






Answer Figures :



Watch Video Solution

77. In the following questions find the missing figure of the series from the given answer figures.


Question Figures :



Answer Figures :



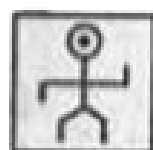
(1)



(2)



(3)



(4)

A. (1)

B. (2)

C. (3)


D. (4)



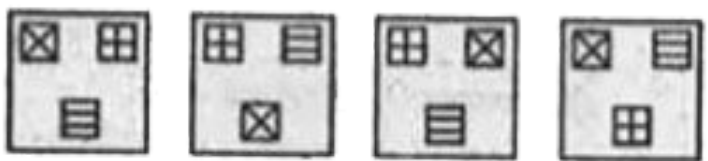
Watch Video Solution

78. In the following questions find the missing figure of the series from the given answer figures.

Question Figures :



Answer Figures :



(1)

(2)

(3)

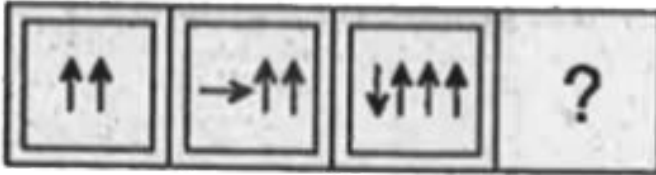
(4)



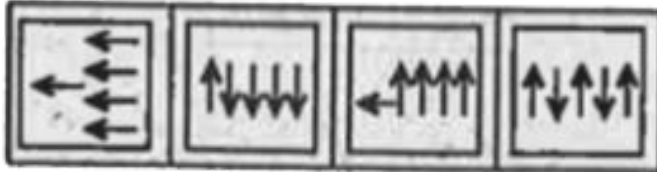
Watch Video Solution

79. A series is given with figure missing. Choose the correct alternative from the given ones that will complete the series.

Question Figures :



Answer Figures :



(1)

(2)

(3)

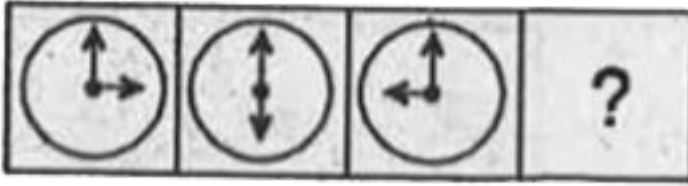
(4)



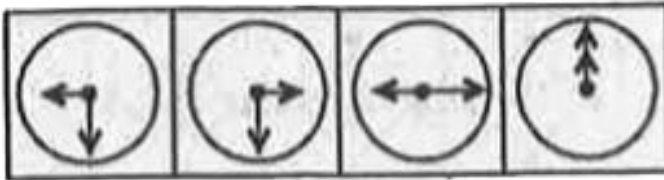
Watch Video Solution

80. A series is given with figure missing. Choose the correct alternative from the given ones that will complete the series.

Question Figures :



Answer Figures :



(1)

(2)

(3)

(4)

A. (1)

B. (2)

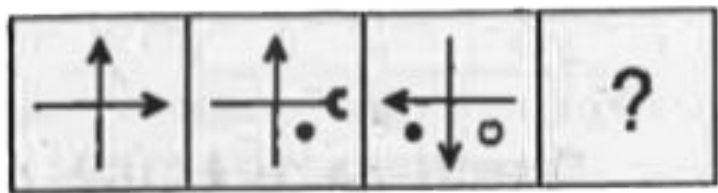
C. (3)

D. (4)

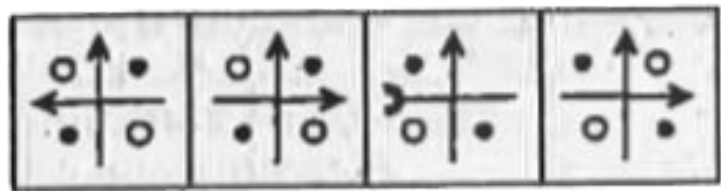


Watch Video Solution

81. A series is given with figure missing. Choose the correct alternative from the given ones that will complete the series.



Answer Figures :



(1)

(2)

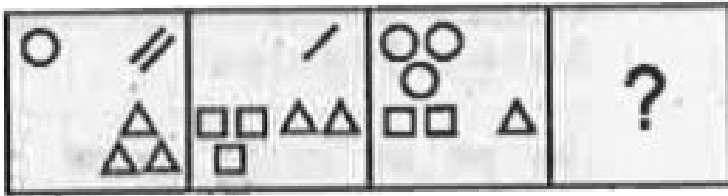
(3)

(4)


[Watch Video Solution](#)

82. A series is given with figure missing. Choose the correct alternative from the given ones that will complete the series.

Question Figures :



Answer Figures :



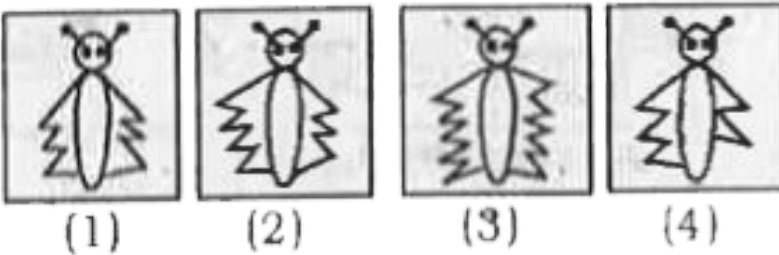
[Watch Video Solution](#)

83. In following questions find the missing figure the series from the given answer figures.

Question Figures :




Answer Figures :



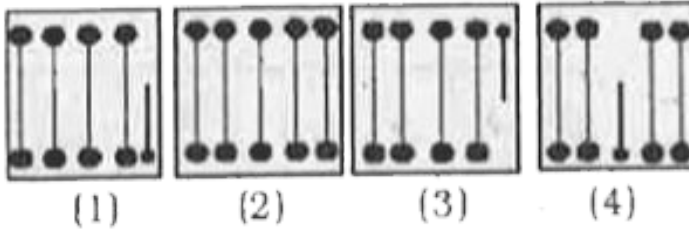
Watch Video Solution

84. In following questions find the missing figure the series from the given answer figures.

Question Figures :




Answer Figures :




[Watch Video Solution](#)

85. In following questions find the missing figure the series from the given answer figures.

Question Figures :



Answer Figures :



(1)

(2)

(3)


(4)




Watch Video Solution

86. In following questions find the missing figure the series from the given answer figures.

Question Figure :



Answer Figures :



(1)

(2)

(3)

(4)



Watch Video Solution

87. Find the missing figure In the series from the given answer figures.

Question Figure :



Answer Figures :



(1)

(2)

(3)

(4)



Watch Video Solution

88. Find the missing figure In the series from the given answer figures.

Question Figures :



Answer Figures :



(1)

(2)

(3)

(4)



Watch Video Solution

89. Find the missing figure In the series from the given answer figures.

Question Figures :



Answer Figures :



(1)

(2)

(3)

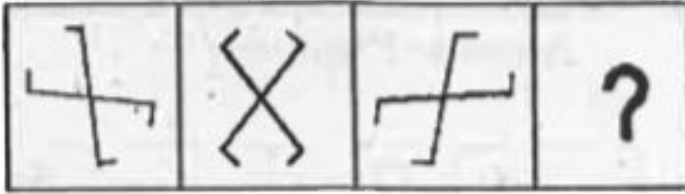
(4)



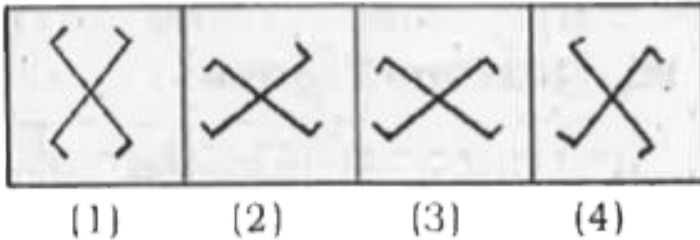
Watch Video Solution

90. A series is given with figure missing. Choose the correct alternative from the given ones that will complete the series.

Question Figures :



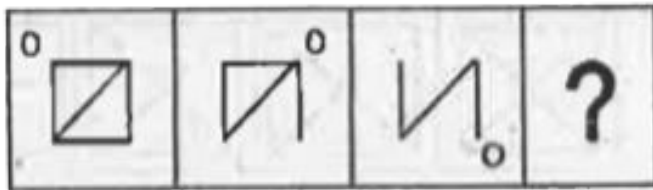
Answer Figures :



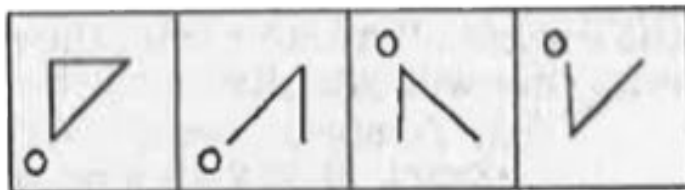
Watch Video Solution

91. A series is given with figure missing. Choose the correct alternative from the given ones that will complete the series.

Question Figures :



Answer Figures :



(1)

(2)

(3)

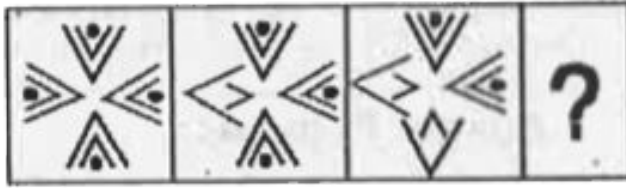
(4)



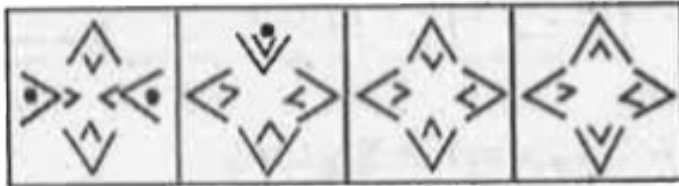
Watch Video Solution

92. A series is given with figure missing. Choose the correct alternative from the given ones that will complete the series.

Question Figures :



Answer Figures :



(1)

(2)

(3)

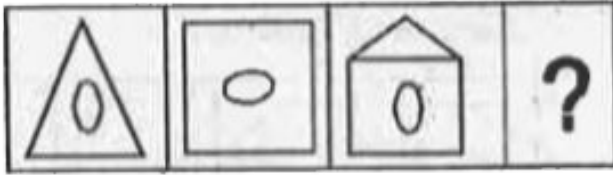
(4)



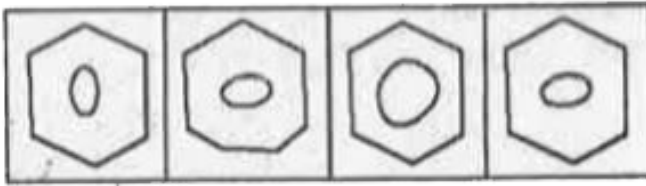
Watch Video Solution

93. A series is given with figure missing. Choose the correct alternative from the given ones that will complete the series.

Question Figures :



Answer Figures :



(1)

(2)

(3)


(4)



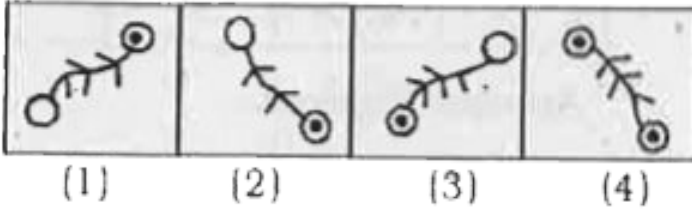
Watch Video Solution

94. A series is given with figure missing. Choose the correct alternative from the given ones that will complete the series.

Question Figures :




Answer Figures :



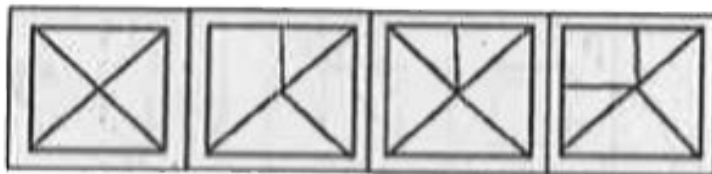
[Watch Video Solution](#)

95. A series is given with figure missing. Choose the correct alternative from the given ones that will complete the series.

Question Figures :



Answer Figures :



(1)

(2)

(3)

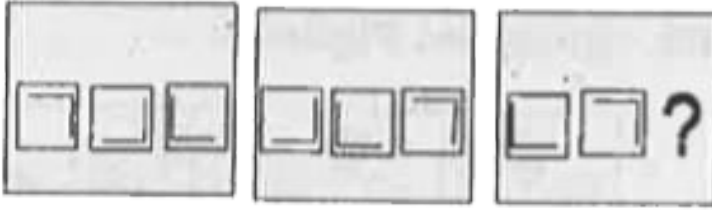
(4)



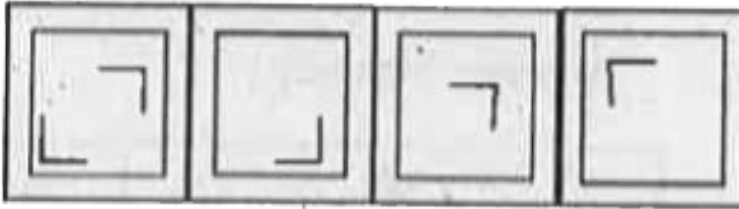
Watch Video Solution

96. A series is given with figure missing. Choose the correct alternative from the given ones that will complete the series.

Question Figures :



Answer Figures :



(1)

(2)

(3)


(4)




Watch Video Solution

97. A series is given with figure missing. Choose the correct alternative from the given ones that will complete the series.

Question Figures :



Answer Figures :



(1)

(2)

(3)

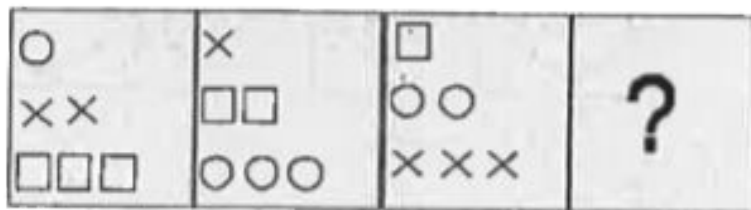
(4)



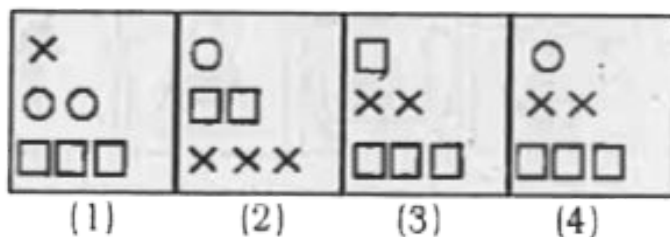
Watch Video Solution

98. A series is given with figure missing. Choose the correct alternative from the given ones that will complete the series.

. Question Figures :




Answer Figures :



Watch Video Solution

99. A series is given with missing. Choose the correct alternative from the given ones that will complete the series.

Question Figures :



Answer Figures :



(1)

(2)

(3)

(4)



Watch Video Solution

100. A series is given with missing. Choose the correct alternative from the given ones that will complete the series.

Question Figures :



Answer Figures :



(1)

(2)

(3)

(4)




Watch Video Solution

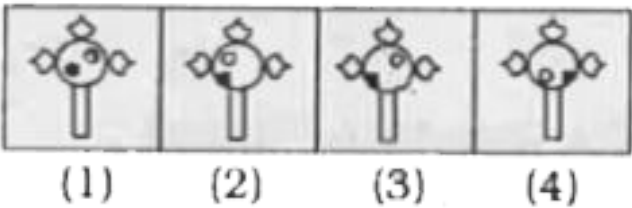
101. In each of the following questions, a series is given with one term missing. Choose the correct alternative from the given

ones that will complete the series.

Question Figures :



Answer Figures :

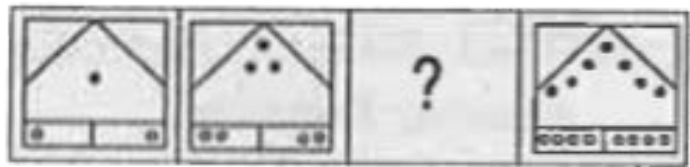


Watch Video Solution

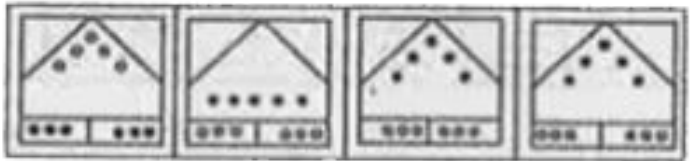
102. In each of the following questions, a series is given with one term missing. Choose the correct alternative from the given

ones that will complete the series.

Question Figures :



Answer Figures :



(1)

(2)

(3)

(4)

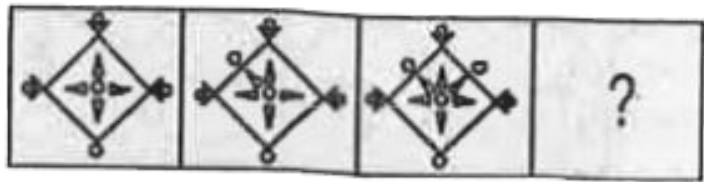


Watch Video Solution

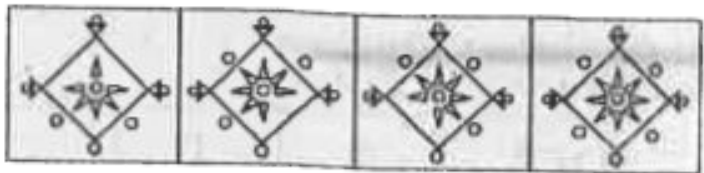
103. In each of the following questions, a series is given with one term missing. Choose the correct alternative from the given

ones that will complete the series.

Question Figures :



Answer Figures :



(1)

(2)

(3)


(4)




Watch Video Solution

104. A series is given with one term missing. Choose the correct alternative from the given ones that will complete the series.

Question Figures :



Answer Figures :



(1)

(2)

(3)


(4)




Watch Video Solution

105. A series is given with one term missing. Choose the correct alternative from the given ones that will complete the series.

Question Figures :



Answer Figures :



(1)

(2)

(3)


(4)



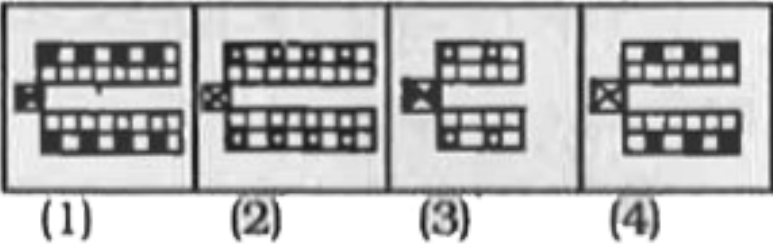
Watch Video Solution

106. In each of the following questions a series is given with one term missing. Choose the correct alternative from the given

ones that will complete the series.



Answer Figures :




Watch Video Solution


107. In each of the following questions a series is given with one term missing. Choose the correct alternative from the given

ones that will complete the series.

. Question Figures :



Answer Figures :



(1)

(2)

(3)

(4)



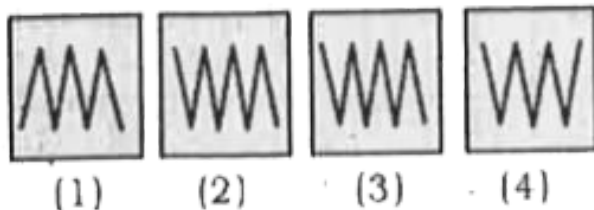
Watch Video Solution

108. A series is given with one term missing. Choose the correct alternative from the given ones that will complete the series.

Question Figures :



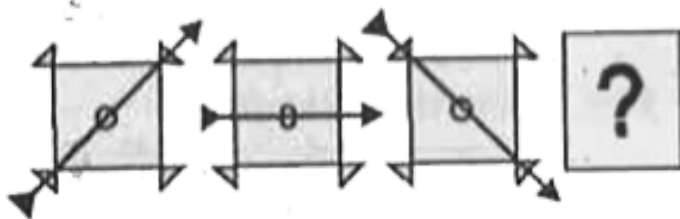
Answer Figures :



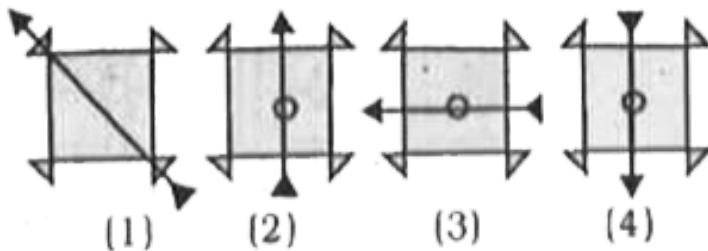
Watch Video Solution

109. A series is given with one term missing. Choose the correct alternative from the given ones that will complete the series.

Question Figures :



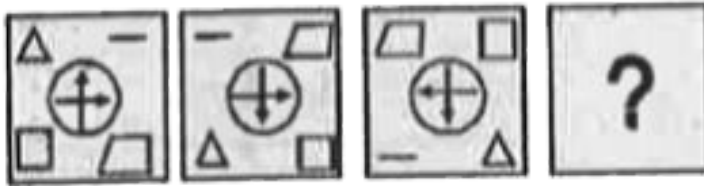
Answer Figures :



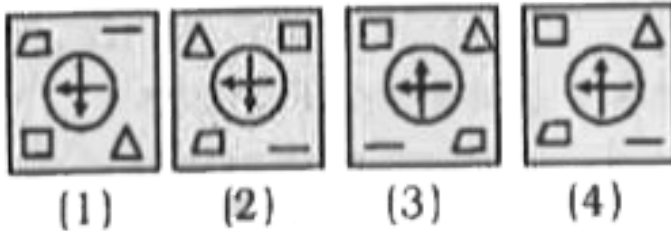
Watch Video Solution

110. A series is given with one term missing. Choose the correct alternative from the given ones that will complete the series.

Question Figures :




Answer Figures :



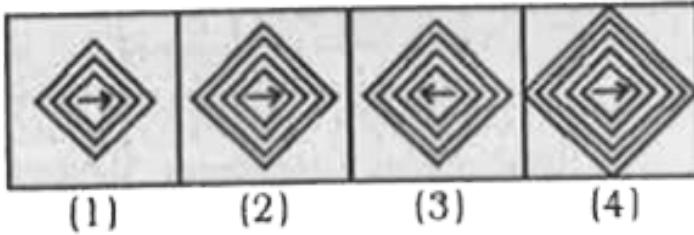
Watch Video Solution

111. A series is given with figure missing. Choose the correct alternative from the given ones that will complete the series.

Question Figures :




Answer Figures :



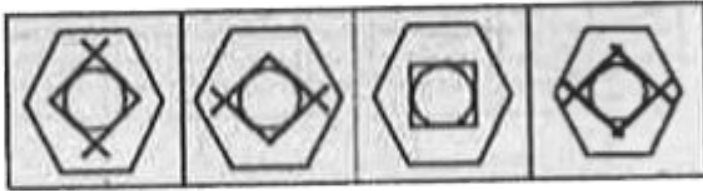
[Watch Video Solution](#)

112. A series is given with figure missing. Choose the correct alternative from the given ones that will complete the series.

Question Figures :



Answer Figures :



(1)

(2)

(3)

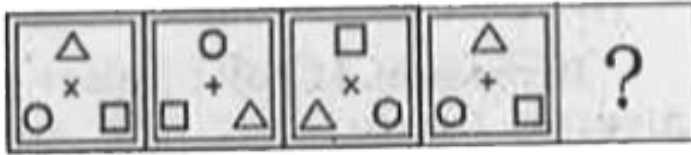
(4)



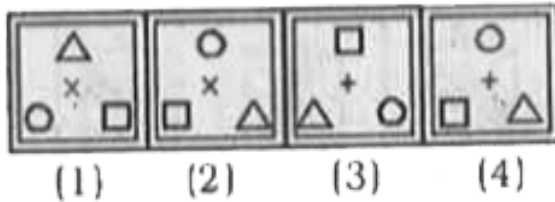
Watch Video Solution

113. A series is given with one term missing. Choose the correct alternative from the given ones that will complete the series.

Questions Figures :



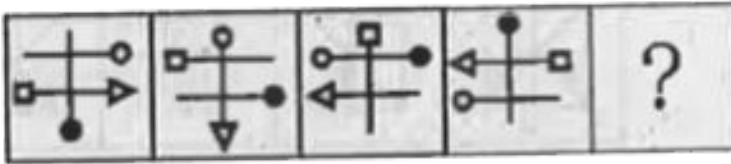
Answer Figures :



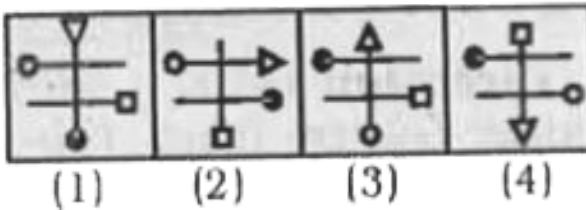
[Watch Video Solution](#)

114. A series is given with one term missing. Choose the correct alternative from the given ones that will complete the series.

Questions Figures :



Answer Figures :



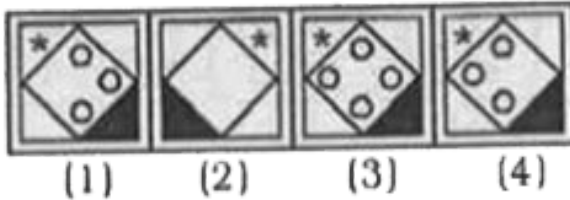
Watch Video Solution

115. A series is given with one term missing. Choose the correct alternative from the given ones that will complete the series.

Questions Figures :



Answer Figures ::

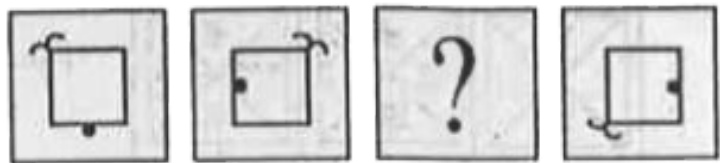


Watch Video Solution

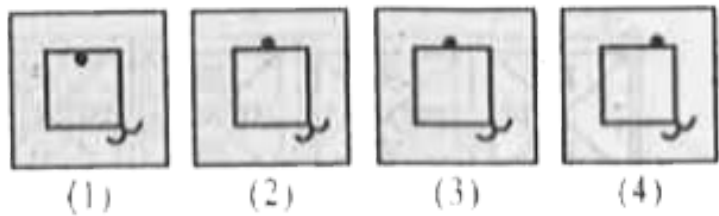
116. In the following question a series is given with one term missing. Choose the correct alternative from the given ones that

will complete the series.

Question Figures :

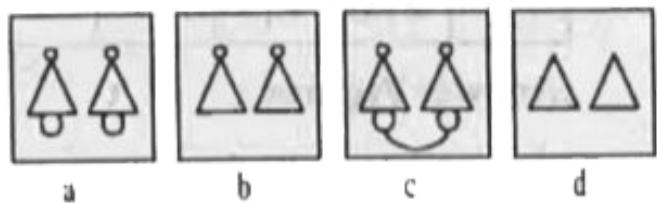


Answer Figures :



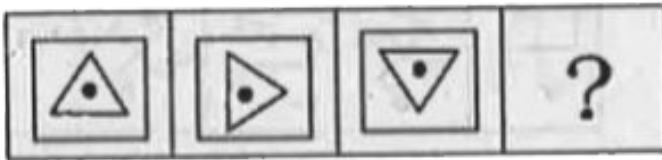
Watch Video Solution

117. Arrange the following figures in a progressive sequential order. Indicate the correct order from the given responses.



118. A series is given with one term missing. Choose the correct alternative from the given ones that will complete the series.

Question Figures :



Answer Figures :



(1)

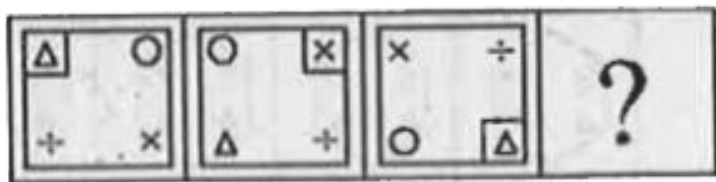
(2)

(3)

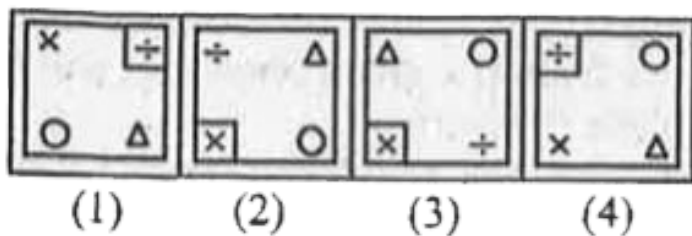
(4)

119. A series is given with one term missing. Choose the correct alternative from the given ones that will complete the series.

Question Figures :



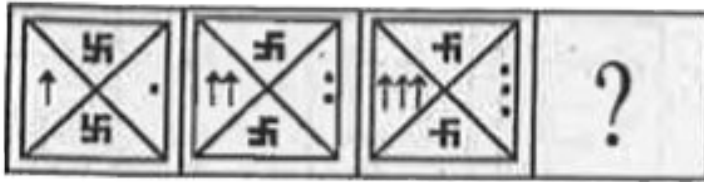
Answer Figures :



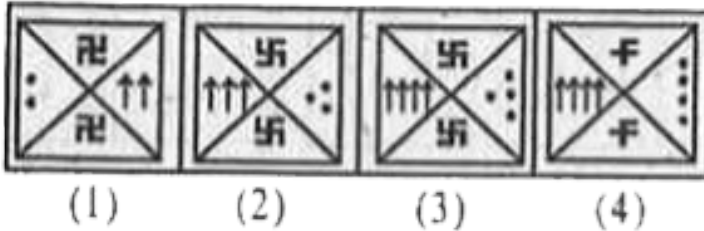
Watch Video Solution

120. A series is given with one term missing. Choose the correct alternative from the given ones that will complete the series.

Question Figures :




Answer Figures :




Watch Video Solution

121. A series is given with one term missing. Choose the correct alternative from the given ones that will complete the series.

Question Figures :



Answer Figures :



(1)

(2)

(3)

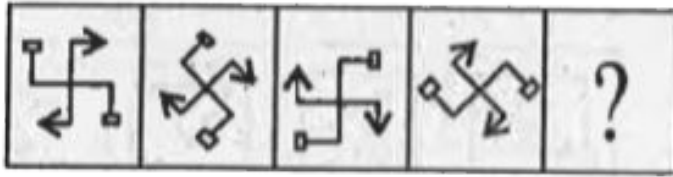
(4)



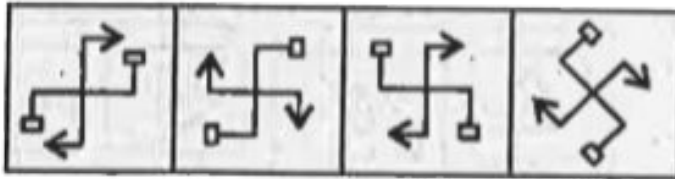
Watch Video Solution

122. A series is given with one term missing. Choose the correct alternative from the given ones that will complete the series.

Question Figures :



Answer Figures :



(1)

(2)

(3)

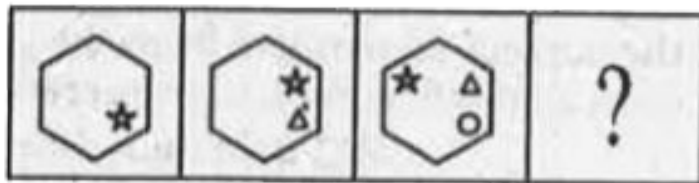
(4)




Watch Video Solution

123. A series is given with one term missing. Choose the correct alternative from the given ones that will complete the series.

Question Figures :



Answer Figures :



(1)

(2)

(3)

(4)




[Watch Video Solution](#)

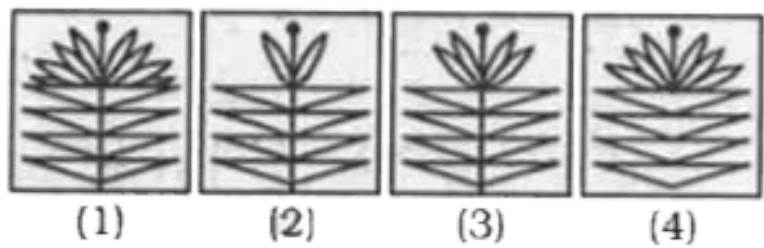
124. In each of the following questions, a series is given with one term missing. Choose the correct alternative from the given

ones that will complete the series.

Question Figures :



Answer Figures :

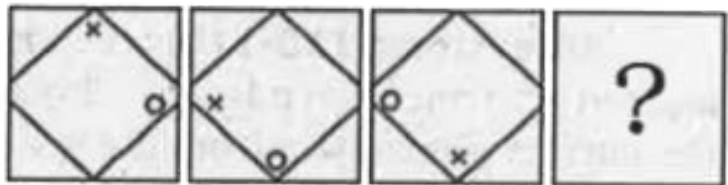


Watch Video Solution

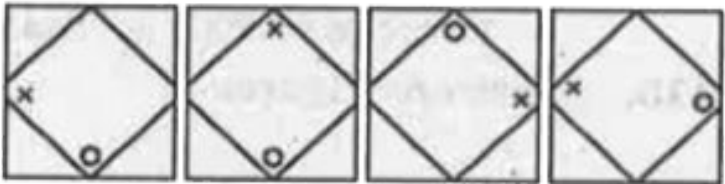
125. In each of the following questions, a series is given with one term missing. Choose the correct alternative from the given

ones that will complete the series.

Question Figures :



Answer Figures :



(1)

(2)

(3)

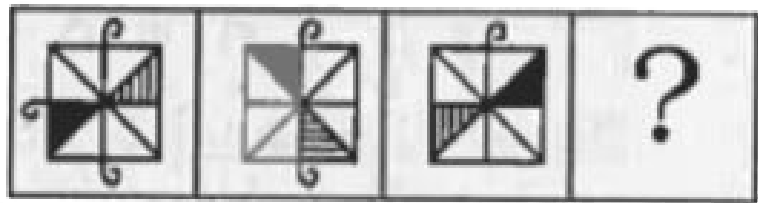
(4)




Watch Video Solution

126. Select the missing figure from the given response.

Question Figures :



Answer Figures :



(1)

(2)

(3)

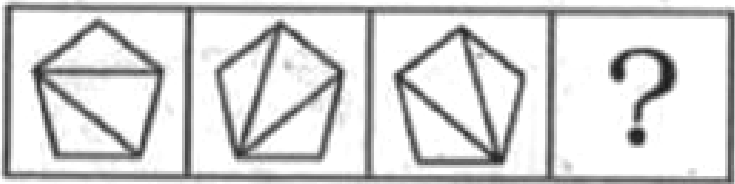
(4)



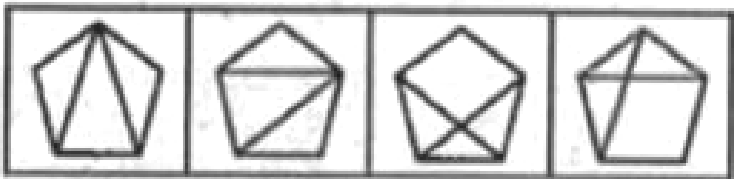
Watch Video Solution

127. Select the missing figure from the given responses.

Question Figures :



Answer Figures :



(1)

(2)

(3)

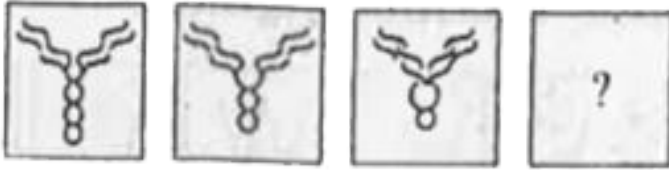
(4)



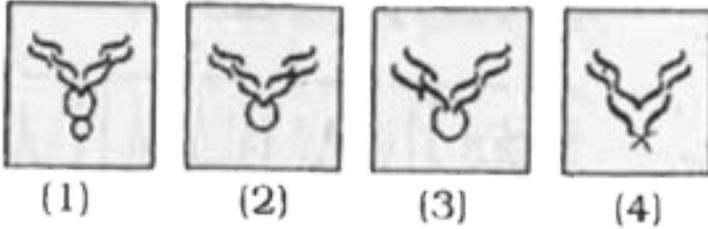
Watch Video Solution

128. A series is given with one term missing. Choose the correct alternative from the given ones that will complete the series.

Question Figures :



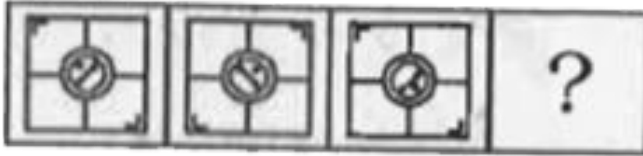
Answer Figures :



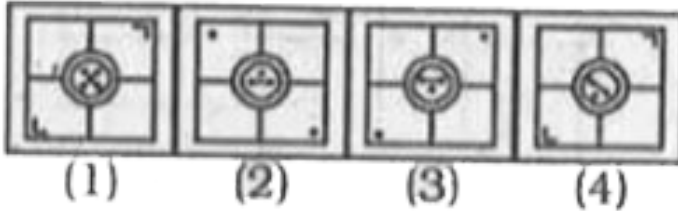
Watch Video Solution

129. In the following questions, select the missing figure from the given responses.

Question Figures :




Answer Figures :



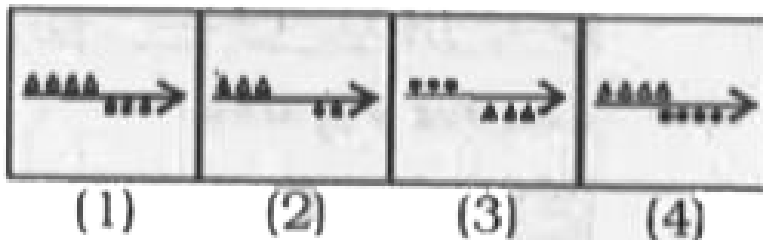
Watch Video Solution

130. In the following questions, select the missing figure from the given responses.

Question Figures :



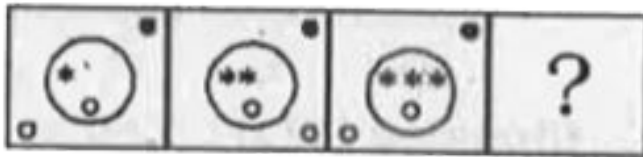
Answer Figures :



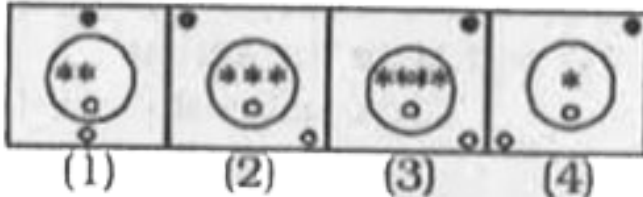
Watch Video Solution

131. In the following questions, select the missing figure from the given responses.

Question Figures :




Answer Figures :



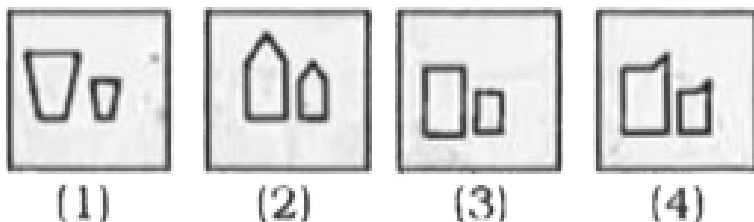
Watch Video Solution

132. Which figure will come next?

Question Figures :



Answer Figures :

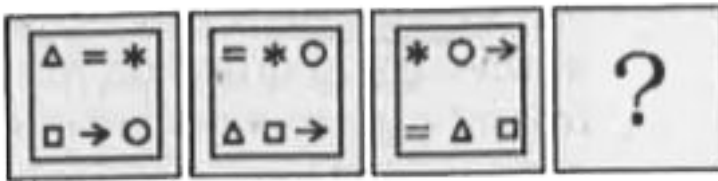




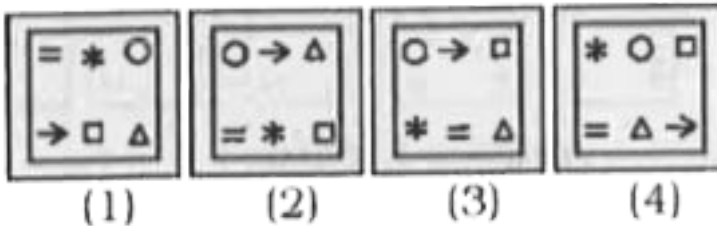
Watch Video Solution

133. In each of the following questions, which answer figure will come next in the series of question figures ?

Question Figures :




Answer Figures :




Watch Video Solution

134. In each of the following questions, which answer figure will come next in the series of question figures ?

Question Figures :



Answer Figures :



(1)

(2)

(3)


(4)



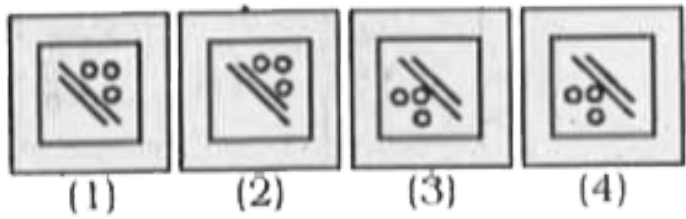
Watch Video Solution

135. Identify the missing figure to complete the matrix.

Question Figure :



Answer Figures :



Watch Video Solution

136. Which figure will come next in the series from the given alternatives ?

Question Figures :



Answer Figures :



(1)

(2)

(3)

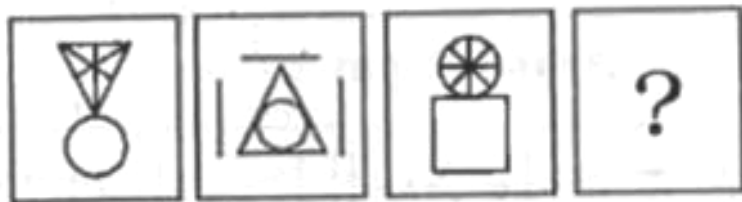
(4)



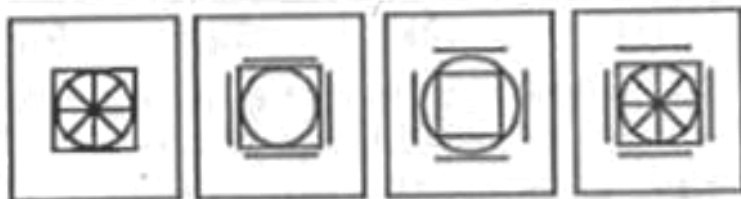
Watch Video Solution

137. Find the missing figure of the series from the given responses.

Question Figures :



Answer Figures :



(1)

(2)

(3)

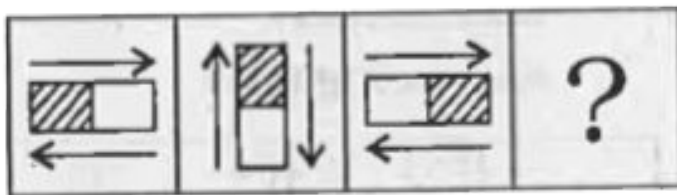
(4)



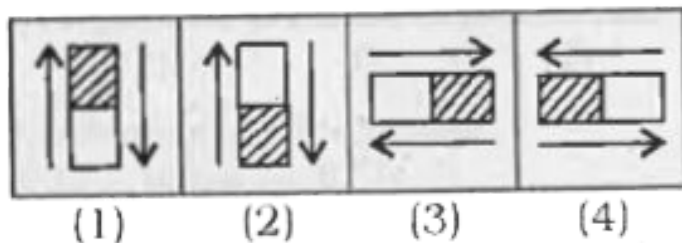
Watch Video Solution

138. Find the missing figure of the series from the given responses.

Question Figures :



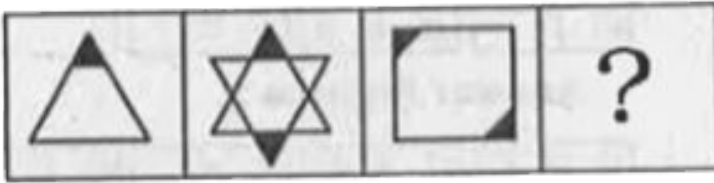
Answer Figures :



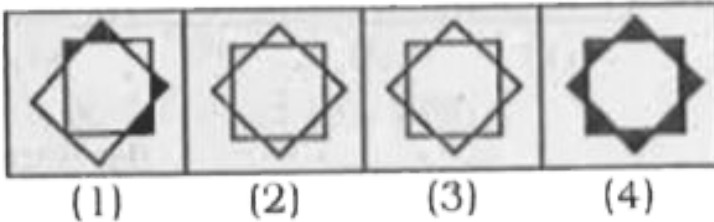
Watch Video Solution

139. Find the missing figure of the series from the given responses.

Question Figures :




Answer Figures :



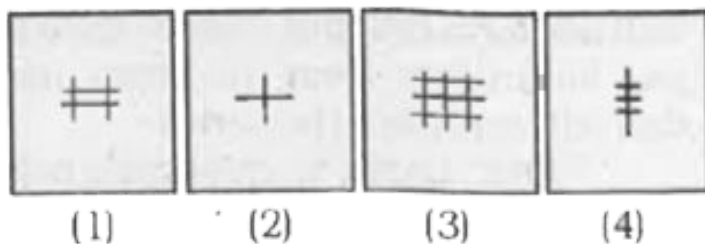
[Watch Video Solution](#)

140. Which answer figure will complete the pattern in the question figure ?

Question Figure :



Answer Figures :



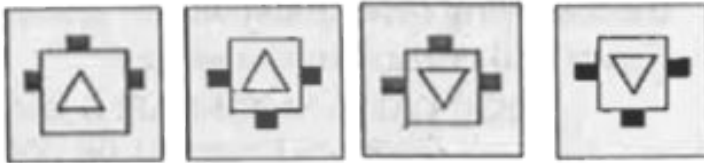
Watch Video Solution

141. Find the missing figure of the series from the given responses :

Question Figures :



Answer Figures :



(1)

(2)


(3)

(4)

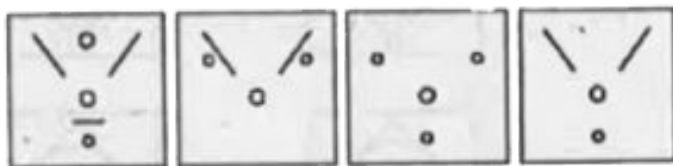


Watch Video Solution

Question Figures :



Answer Figures :



(1)

(2)

(3)

(4)

142.



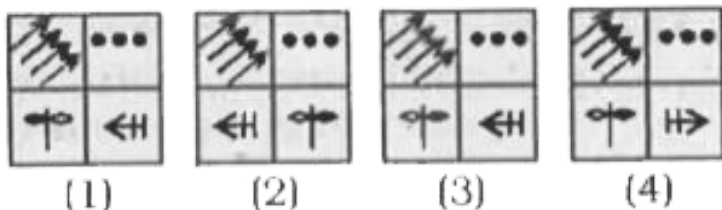
Watch Video Solution

143. In each of the following questions, a series is given with alternative from the given ones that will complete the series.

Question Figures :



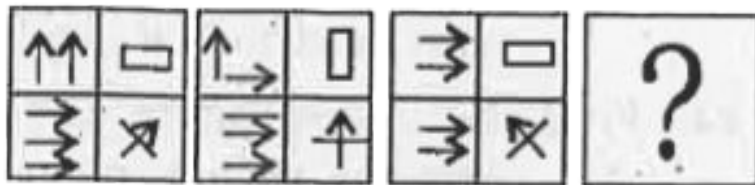
Answer Figures :



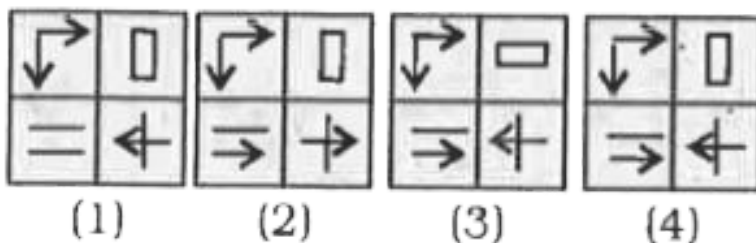
Watch Video Solution

144. In each of the following questions, a series is given with alternative from the given ones that will complete the series.

Question Figures :



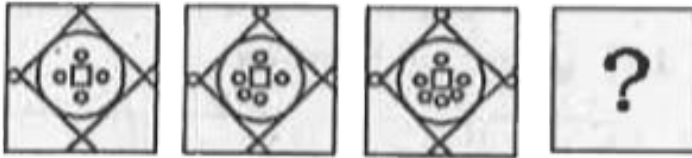
Answer Figures :



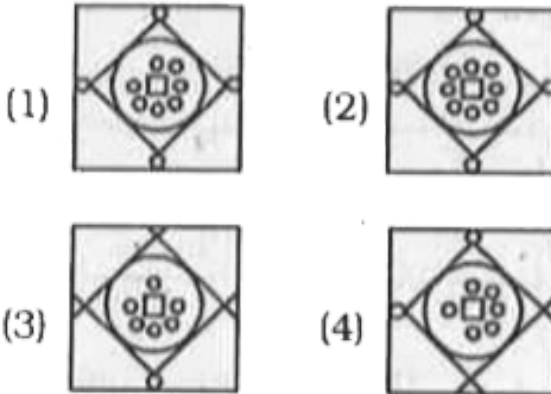
Watch Video Solution

145. In each of figure will following questions, which answer figure will complete the series ?

Question Figures :



Answer Figures :



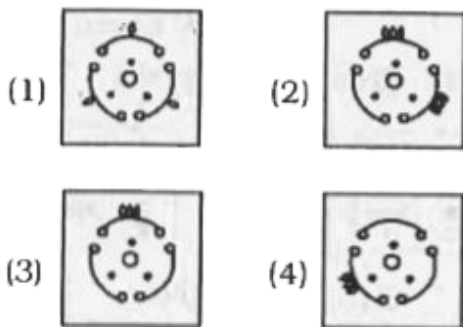
[Watch Video Solution](#)

146. In each of figure will following questions, which answer figure will complete the series ?

Question Figures :



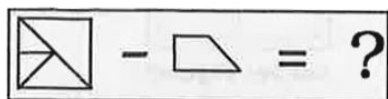
Answer Figures :



Watch Video Solution

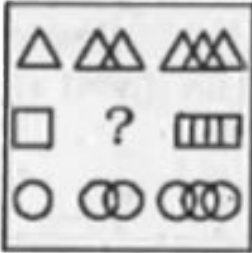
147. In the question one part of the problem figure is subtracted
Select the option that shows the correct shape by the subtraction.

Question Figure :

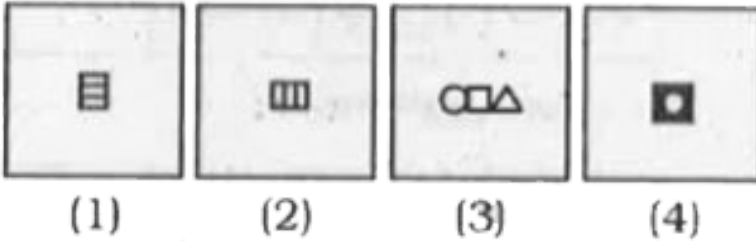


148. Choose the correct figure to complete the matrix :

Questions Figure :




Answer Figures :




149. In the following questions, which answer figure will complete the pattern in the questions figure ?

Question Figures :



Answer Figures :



(1)

(2)

(3)


(4)



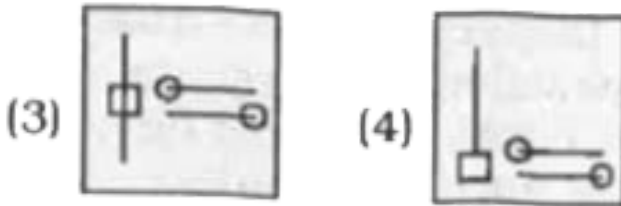
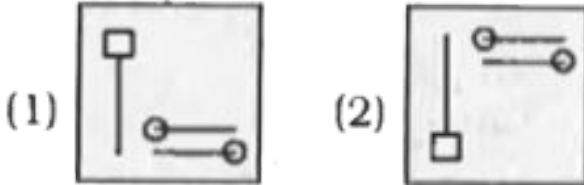
[Watch Video Solution](#)

150. In the following question, select the figure which can be placed at the sign of question mark (?) from the given alternatives :

Question Figures :



Answer Figures :



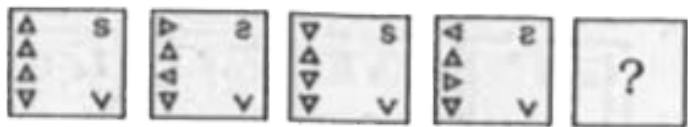
[Watch Video Solution](#)

151. In the following question, select the figure which can be placed at the sign of question mark (?) from the given

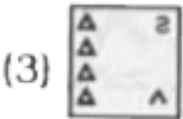
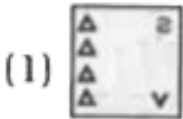
alternatives :

--

Question Figures :



Answer Figures :





Watch Video Solution

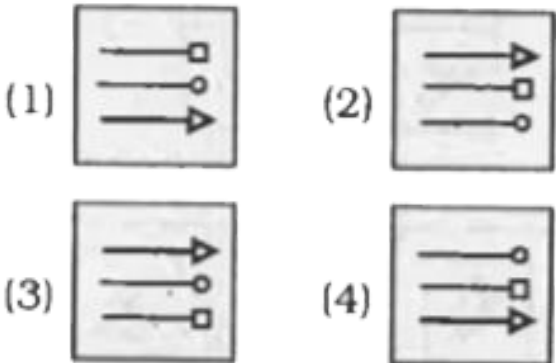
152. In the following question, select the figure which can be placed at the sign of question mark (?) from the given

alternatives :

Question Figures :



Answer Figures :



Watch Video Solution

TYPE -I

1. The following question, a series is given, with one term missing. Choose the correct alternative from the given ones that

will complete the series.

10, 100, 200, 310 ?

A. 400

B. 210

C. 420

D. 430

Answer: D



Watch Video Solution

2. The following question, a series is given, with one term missing. Choose the correct alternative from the given ones that will complete the series.

4/12/95, 1/1/96, 29/1/96, 26/2/96 ?

A. $24/3/96$

B. $25/3/96$

C. $26/3/96$

D. $27/3/96$

Answer: B



Watch Video Solution

3. The following question, a series is given, with one term missing. Choose the correct alternative from the given ones that will complete the series.

2, 3, 10, 29, 66, ?

A. 89

B. 99

C. 127

D. 130

Answer: C



Watch Video Solution

4. The following question, a series is given, with one term missing. Choose the correct alternative from the given ones that will complete the series.

1,0,3,2,5,6 ?

A. 9

B. 8

C. 10

D. 7

Answer: D



Watch Video Solution

5. The following question, a series is given, with one term missing. Choose the correct alternative from the given ones that will complete the series.

1438, 1429, 1417, 1402, ?

A. 1378

B. 1384

C. 1387

D. 1392

Answer: B



Watch Video Solution

6. The following question, a series is given, with one term missing. Choose the correct alternative from the given ones that will complete the series.

18, 24, 21, 27, ?, 30, 27

A. 33

B. 20

C. 24

D. 21

Answer: C



Watch Video Solution

7. The following question, a series is given, with one term missing. Choose the correct alternative from the given ones that will complete the series.

$$\frac{2}{3}, \frac{4}{7}, \dots, \frac{11}{21}, \frac{16}{31}$$

A. $\frac{6}{11}$

B. $\frac{5}{9}$

C. $\frac{9}{17}$

D. $\frac{7}{13}$

Answer: D



Watch Video Solution

8. The following question, a series is given, with one term missing. Choose the correct alternative from the given ones that

will complete the series.

25, 50, 30, 45, 35, 40, ?

A. 30

B. 35

C. 40

D. 45

Answer: C



Watch Video Solution

9. The following question, a series is given, with one term missing. Choose the correct alternative from the given ones that will complete the series.

2460, 3570, 4680, ?

A. 8640

B. 5670

C. 5970

D. 5790

Answer: D



Watch Video Solution

10. The following question, a series is given, with one term missing. Choose the correct alternative from the given ones that will complete the series.

7714, 7916, 8109, ?

A. 8311

B. 8312

C. 8509

D. 8515

Answer: A



Watch Video Solution

11. The following question, a series is given, with one term missing. Choose the correct alternative from the given ones that will complete the series.

5760, 960, ?, 48, 16, 8

A. 240

B. 192

C. 160

D. 120

Answer: B



Watch Video Solution

12. The following question, a series is given, with one term missing. Choose the correct alternative from the given ones that will complete the series.

3, 15, 35, 63, ?

A. 77

B. 84

C. 99

D. 98

Answer: C



Watch Video Solution

13. The following question, a series is given, with one term missing. Choose the correct alternative from the given ones that will complete the series.

22, 24, 28, ?, 52, 84

A. 46

B. 36

C. 38

D. 42

Answer: B



Watch Video Solution

14. The following question, a series is given, with one term missing. Choose the correct alternative from the given ones that will complete the series.

3, 7, 23, 95 ?

A. 575

B. 479

C. 128

D. 62

Answer: B



Watch Video Solution

15. The following question, a series is given, with one term missing. Choose the correct alternative from the given ones that

will complete the series.

2, 5, 9, 19, 37, ?

A. 73

B. 75

C. 76

D. 78

Answer: B



Watch Video Solution

16. The following question, a series is given, with one term missing. Choose the correct alternative from the given ones that will complete the series.

0, ?, 8, 15, 24

A. 1

B. 3

C. 5

D. 2

Answer: B



Watch Video Solution

17. The following question, a series is given, with one term missing. Choose the correct alternative from the given ones that will complete the series.

3, 15, ?, 63, 99, 143

A. 27

B. 45

C. 35

D. 56

Answer: C



Watch Video Solution

18. The following question, a series is given, with one term missing. Choose the correct alternative from the given ones that will complete the series.

3, 28, 4, 65, 5, 126, 6, ?

A. 215

B. 216

C. 217

D. 218

Answer: C



Watch Video Solution

19. The following question, a series is given, with one term missing. Choose the correct alternative from the given ones that will complete the series.

3691, 6931, 9361, 3691, ?

A. 1369

B. 6931

C. 1963

D. 3961

Answer: B



Watch Video Solution

20. The following question, a series is given, with one term missing. Choose the correct alternative from the given ones that will complete the series.

10, 22, 46, 94, ?

A. 180

B. 184

C. 190

D. 140

Answer: C



Watch Video Solution

21. The following question, a series is given, with one term missing. Choose the correct alternative from the given ones that will complete the series.

110, 132, 156, ?, 210

A. 162

B. 172

C. 182

D. 192

Answer: C



Watch Video Solution

22. The following question, a series is given, with one term missing. Choose the correct alternative from the given ones that

will complete the series.

1, 2, 2, 4, 8, ?

A. 8

B. 9

C. 16

D. 32

Answer: C



Watch Video Solution

23. The following question, a series is given, with one term missing. Choose the correct alternative from the given ones that will complete the series.

40, 60, 47, 53, 54, ?

A. 33

B. 39

C. 46

D. 61

Answer: C



Watch Video Solution

24. The following question, a series is given, with one term missing. Choose the correct alternative from the given ones that will complete the series.

12, 21, 23, 32, 34, ?

A. 43

B. 41

C. 25

D. 35

Answer: A



Watch Video Solution

25. The following question, a series is given, with one term missing. Choose the correct alternative from the given ones that will complete the series.

3, 10, 20, 33, 49, 68, ?

A. 75

B. 85

C. 90

D. 91

Answer: C



Watch Video Solution

26. The following question, a series is given, with one term missing. Choose the correct alternative from the given ones that will complete the series.

15, 31, 64, 131, ?

A. 266

B. 256

C. 192

D. 524

Answer: A



Watch Video Solution

27. The following question, a series is given, with one term missing. Choose the correct alternative from the given ones that will complete the series.

100, 52, 28, 16, 10, ?

A. 5

B. 7

C. 8

D. 9

Answer: B



Watch Video Solution

28. The following question, a series is given, with one term missing. Choose the correct alternative from the given ones that will complete the series.

48, 24, 96, 48, 192, _____ ?

A. 98

B. 90

C. 96

D. 76

Answer: C



Watch Video Solution

29. The following question, a series is given, with one term missing. Choose the correct alternative from the given ones that

will complete the series.

3, 10, 101, ?

A. 10101

B. 11012

C. 10202

D. 10201

Answer: C



Watch Video Solution

30. The following question, a series is given, with one term missing. Choose the correct alternative from the given ones that will complete the series.

18, 24, 21, 27, ?, 30, 27

A. 33

B. 30

C. 24

D. 21

Answer: C



Watch Video Solution

31. The following question, a series is given, with one term missing. Choose the correct alternative from the given ones that will complete the series.

2, 5, 10, 17, 26, 37, 50, ?

A. 63

B. 65

C. 67

D. 69

Answer: B



Watch Video Solution

32. The following question, a series is given, with one term missing. Choose the correct alternative from the given ones that will complete the series.

6, 11, 21, 36, 56, _____

A. 51

B. 91

C. 42

D. 81

Answer: D



Watch Video Solution

33. The following question, a series is given, with one term missing. Choose the correct alternative from the given ones that will complete the series.

26, 37, 50, 65, _____, 101

A. 77

B. 80

C. 81

D. 82

Answer: D



Watch Video Solution

34. The following question, a series is given, with one term missing. Choose the correct alternative from the given ones that will complete the series.

5, 9 , 13, 17 , _____ , 25

A. 27

B. 23

C. 21

D. 19

Answer: C



Watch Video Solution

35. The following question, a series is given, with one term missing. Choose the correct alternative from the given ones that will complete the series.

5 , 2 , 7 , 9 , 16 , 25 _____

A. 41

B. 52

C. 48

D. 45

Answer: A



Watch Video Solution

36. The following question, a series is given, with one term missing. Choose the correct alternative from the given ones that

will complete the series.

4117, 5138, 6159, 7170, _ _

A. 7138

B. 7659

C. 8191

D. 8179

Answer: C



Watch Video Solution

37. The following question, a series is given, with one term missing. Choose the correct alternative from the given ones that will complete the series.

7, 22, 37, _ _ , 67, 82

A. 40

B. 42

C. 52

D. 62

Answer: C



Watch Video Solution

38. The following question, a series is given, with one term missing. Choose the correct alternative from the given ones that will complete the series.

4, 24, 48, 80, _ , 168

A. 120

B. 108

C. 96

D. 72

Answer: A



Watch Video Solution

39. The following question, a series is given, with one term missing. Choose the correct alternative from the given ones that will complete the series.

264, 396, 473, 583, ____

A. 597

B. 673

C. 729

D. 792

Answer: D



Watch Video Solution

40. The following question, a series is given, with one term missing. Choose the correct alternative from the given ones that will complete the series.

0, 2, 6, 12, ?, 30, 42

A. 24

B. 20

C. 21

D. 22

Answer: B



Watch Video Solution

41. The following question, a series is given, with one term missing. Choose the correct alternative from the given ones that will complete the series.

5, 7, 11, 19, 35, 67, ?, 259

A. 130

B. 129

C. 131

D. 140

Answer: C



Watch Video Solution

42. The following question, a series is given, with one term missing. Choose the correct alternative from the given ones that will complete the series.

3, 7, 15, 31, 63, 127, ?

A. 255

B. 260

C. 245

D. 265

Answer: A



Watch Video Solution

43. The following question, a series is given, with one term missing. Choose the correct alternative from the given ones that

will complete the series.

3, 7, 15, 31, 63, 127, ?

A. 50

B. 58

C. 57

D. 156

Answer: C



Watch Video Solution

44. The following question, a series is given, with one term missing. Choose the correct alternative from the given ones that will complete the series.

— 1, 2, 7, ?, 23, 34, 47

A. 13

B. 14

C. 12

D. 15

Answer: B



Watch Video Solution

45. The following question, a series is given, with one term missing. Choose the correct alternative from the given ones that will complete the series.

33, 28, 24, _____, 19, 18

A. 21

B. 22

C. 20

D. 23

Answer: A



Watch Video Solution

46. The following question, a series is given, with one term missing. Choose the correct alternative from the given ones that will complete the series.

6, 10, 18, 34, _____

A. 46

B. 56

C. 66

D. 76

Answer: C



Watch Video Solution

47. The following question, a series is given, with one term missing. Choose the correct alternative from the given ones that will complete the series.

4, 8, 12, 24, 36, _____

A. 72

B. 48

C. 60

D. 144

Answer: A



Watch Video Solution

48. The following question, a series is given, with one term missing. Choose the correct alternative from the given ones that will complete the series.

8, 17, 36, 75, ?

A. 154

B. 124

C. 174

D. 144

Answer: A



Watch Video Solution

49. The following question, a series is given, with one term missing. Choose the correct alternative from the given ones that will complete the series.

1, 3, 4, 7, 11, ____

A. 18

B. 17

C. 15

D. 16

Answer: A



Watch Video Solution

50. The following question, a series is given, with one term missing. Choose the correct alternative from the given ones that

will complete the series.

118, 182, 186, 222, ____

A. 318

B. 266

C. 258

D. 226

Answer: D



Watch Video Solution

51. The following question, a series is given, with one term missing. Choose the correct alternative from the given ones that will complete the series.

2, 7, 27, 107, ____

A. 327

B. 427

C. 227

D. 127

Answer: B



Watch Video Solution

52. The following question, a series is given, with one term missing. Choose the correct alternative from the given ones that will complete the series.

5, 7, 11, ?, 35, 67

A. 23

B. 28

C. 30

D. 19

Answer: D



Watch Video Solution

53. The following question, a series is given, with one term missing. Choose the correct alternative from the given ones that will complete the series.

242 , 393 , 4164 ?

A. 5525

B. 5255

C. 5235

D. 5325

Answer: B



Watch Video Solution

54. The following question, a series is given, with one term missing. Choose the correct alternative from the given ones that will complete the series.

1, 2, 4, 3, 9, 4, 16, 5, __, __

A. 6, 21

B. 21, 9

C. 25, 6

D. 30, 8

Answer: C



Watch Video Solution

55. The following question, a series is given, with one term missing. Choose the correct alternative from the given ones that will complete the series.

9, 27, 31, 155, 161, 1127, _____

A. 1135

B. 1288

C. 316

D. 2254

Answer: A



Watch Video Solution

56. The following question, a series is given, with one term missing. Choose the correct alternative from the given ones that will complete the series.

1, 2, 3, 14, 5, 34, 7, _____, _____

- A. 68, 7
- B. 63, 9
- C. 60, 11
- D. 62, 9

Answer: D



Watch Video Solution

57. The following question, a series is given, with one term missing. Choose the correct alternative from the given ones that

will complete the series.

255, 366, 479, 684, _____

A. 891

B. 125

C. 216

D. 343

Answer: A



Watch Video Solution

58. The following question, a series is given, with one term missing. Choose the correct alternative from the given ones that will complete the series.

2, 15, 4, 47, 7, 118, 11, _____, _____

A. 260, 15

B. 252, 16

C. 250, 17

D. 254, 16

Answer: D



Watch Video Solution

59. The following question, a series is given, with one term missing. Choose the correct alternative from the given ones that will complete the series.

313, 623, 933, 1243, ?

A. 1863

B. 2173

C. 1553

D. 2483

Answer: C



Watch Video Solution

60. The following question, a series is given, with one term missing. Choose the correct alternative from the given ones that will complete the series.

44, 56, 69, 83,____, 114

A. 90

B. 98

C. 100

D. 110

Answer: B



Watch Video Solution

61. The following question, a series is given, with one term missing. Choose the correct alternative from the given ones that will complete the series.

6, 7, 18, 23, 38_____

A. 49

B. 47

C. 87

D. 92

Answer: B



Watch Video Solution

62. The following question, a series is given, with one term missing. Choose the correct alternative from the given ones that will complete the series.

27, 32, 30, 35, 33, _____

A. 28

B. 31

C. 36

D. 38

Answer: D



Watch Video Solution

63. The following question, a series is given, with one term missing. Choose the correct alternative from the given ones that will complete the series.

71, 59, 48, 38, 29, _____

A. 18

B. 21

C. 20

D. 38

Answer: B



Watch Video Solution

64. In each of the following questions, a series is given with one term missing. Choose the correct alternative from the given

ones that will complete the series.

3, 4, 7, 11, 18, 29, ?

A. 31

B. 39

C. 43

D. 47

Answer: D



Watch Video Solution

65. In each of the following questions, a series is given with one term missing. Choose the correct alternative from the given ones that will complete the series.

975, 864, 753, 642, ?

A. 431

B. 314

C. 531

D. 532

Answer: C



Watch Video Solution

66. The following question, a series is given, with one term missing. Choose the correct alternative from the given ones that will complete the series.

8, 24, 12, _____, 18, 54

A. 28

B. 36

C. 46

D. 38

Answer: B



Watch Video Solution

67. The following question, a series is given, with one term missing. Choose the correct alternative from the given ones that will complete the series.

0, 4, 18, 48, ?, 180

A. 58

B. 68

C. 84

D. 100

Answer: D



Watch Video Solution

68. The following question, a series is given, with one term missing. Choose the correct alternative from the given ones that will complete the series.

36, 28, 24, 22, ?

A. 18

B. 19

C. 21

D. 22

Answer: C



Watch Video Solution

69. The following question, a series is given, with one term missing. Choose the correct alternative from the given ones that will complete the series.

7, 9, 13, 21, 37, ?

A. 58

B. 63

C. 69

D. 72

Answer: C



Watch Video Solution

70. The following question, a series is given, with one term missing. Choose the correct alternative from the given ones that will complete the series.

18, 25, 23, 30, _____

A. 25

B. 35

C. 28

D. 38

Answer: C



Watch Video Solution

71. The following question, a series is given, with one term missing. Choose the correct alternative from the given ones that

will complete the series.

8, 29, 113, 449, _____

A. 673

B. 984

C. 1484

D. 1793

Answer: D



Watch Video Solution

72. The following question, a series is given, with one term missing. Choose the correct alternative from the given ones that will complete the series.

1, 6, 6, 11, 11, 16, __ , __

A. 13, 11

B. 16, 21

C. 17, 21

D. 21, 16

Answer: B



Watch Video Solution

73. The following question, a series is given, with one term missing. Choose the correct alternative from the given ones that will complete the series.

6341, 5432, _____, 3614

A. 4253

B. 4614

C. 4532

D. 4523

Answer: C



Watch Video Solution

74. The following question, a series is given, with one term missing. Choose the correct alternative from the given ones that will complete the series.

5255, 5306, _____ 5408, 5459

A. 5057

B. 5357

C. 2257

D. 5157

Answer: B



Watch Video Solution

75. The following question, a series is given, with one term missing. Choose the correct alternative from the given ones that will complete the series.

2, 65, 7, 59, 12, 53, ____ , _____

A. 15, 42

B. 17, 45

C. 17, 47

D. 18, 48

Answer: C



Watch Video Solution

76. The following question, a series is given, with one term missing. Choose the correct alternative from the given ones that will complete the series.

56, 90, 132, 184, 248, _____

A. 368

B. 316

C. 362

D. 326

Answer: D



Watch Video Solution

77. The following question, a series is given, with one term missing. Choose the correct alternative from the given ones that will complete the series.

0, 4, 8, 24, 64, 176, _____

A. 180

B. 480

C. 280

D. 300

Answer: D



Watch Video Solution

78. The following question, a series is given, with one term missing. Choose the correct alternative from the given ones that

will complete the series.

14,19,29,49,89, ____? ____

A. 139

B. 149

C. 159

D. 169

Answer: D



Watch Video Solution

79. The following question, a series is given, with one term missing. Choose the correct alternative from the given ones that will complete the series.

121, 144, 289, 324, 529, 576, _____

A. 961

B. 841

C. 900

D. 729

Answer: B



Watch Video Solution

80. The following question, a series is given, with one term missing. Choose the correct alternative from the given ones that will complete the series.

5, 21, 69, 213, 645, _____

A. 1670

B. 1941

C. 720

D. 1320

Answer: B



Watch Video Solution

81. In each of the following questions, a series is given, with one/two terms(s) missing. Choose the correct alternative from the given ones that will complete the series.

4, 196, 16, 169, ?, 144, 64

A. 21

B. 81

C. 36

D. 32

Answer: C



Watch Video Solution

82. In each of the following questions, a series is given, with one/two terms(s) missing. Choose the correct alternative from the given ones that will complete the series.

8, 15, 36, 99, 288, ? _

A. 368

B. 676

C. 855

D. 908

Answer: C



Watch Video Solution

83. In each of the following questions a series is given, with one/two term(s) missing. Choose the correct alternative from the given ones that will complete the series.

9, 8, 10, 16, 11, ?, 12, 64

A. 28

B. 36

C. 25

D. 32

Answer: D



Watch Video Solution

84. The following question, a series is given, with one term missing. Choose the correct alternative from the given ones that will complete the series.

34, 18, 10, ?

A. 8

B. 5

C. 7

D. 6

Answer: D



Watch Video Solution

85. The following question, a series is given, with one term missing. Choose the correct alternative from the given ones that

will complete the series.

100, 50, 52, 26, 28, ?, 16, 8

A. 30

B. 36

C. 14

D. 32

Answer: C



Watch Video Solution

86. The following question, a series is given, with one term missing. Choose the correct alternative from the given ones that will complete the series.

44, 40, 34, ?, 16, 4

A. 28

B. 26

C. 21

D. 19

Answer: B



Watch Video Solution

87. The following question, a series is given, with one term missing. Choose the correct alternative from the given ones that will complete the series.

110, 99, 86, ?, 54, 35

A. 81

B. 75

C. 71

D. 67

Answer: C



Watch Video Solution

88. The following question, a series is given, with one term missing. Choose the correct alternative from the given ones that will complete the series.

2, 3, 5, 6, ?, 9, ?, 12

A. 9, 11

B. 11, 8

C. 8, 11

D. 8, 10

Answer: C



Watch Video Solution

89. The following question, a series is given, with one term missing. Choose the correct alternative from the given ones that will complete the series.

98, 72, ?, 32, 18, 8

A. 42

B. 46

C. 50

D. 54

Answer: C



Watch Video Solution

90. The following question, a series is given, with one term missing. Choose the correct alternative from the given ones that will complete the series.

4, 12, 36, 108, ?, 972

A. 226

B. 324

C. 423

D. 432

Answer: C



Watch Video Solution

91. The following question, a series is given, with one term missing. Choose the correct alternative from the given ones that will complete the series.

19, 23, 26, 30, 33, ?

A. 37

B. 35

C. 37

D. 39

Answer: C



Watch Video Solution

92. The following question, a series is given, with one term missing. Choose the correct alternative from the given ones that

will complete the series.

240, 120, 60, ?, 15

A. 20

B. 25

C. 30

D. 10

Answer: C



Watch Video Solution

93. The following question, a series is given, with one term missing. Choose the correct alternative from the given ones that will complete the series.

1, 3, 7, 13, 21, ?

A. 27

B. 29

C. 31

D. 33

Answer: C



Watch Video Solution

94. The following question, a series is given, with one term missing. Choose the correct alternative from the given ones that will complete the series.

133, 119, 105, 91, ?

A. 80

B. 77

C. 85

D. 79

Answer: B



Watch Video Solution

95. The following question, a series is given, with one term missing. Choose the correct alternative from the given ones that will complete the series.

80, 40, 20, ?, 5

A. 10

B. 30

C. 60

D. 90

Answer: A



Watch Video Solution

96. The following question, a series is given, with one term missing. Choose the correct alternative from the given ones that will complete the series.

128, ?, 82, 62, 44, 28

A. 99

B. 104

C. 109

D. 106

Answer: B



Watch Video Solution

97. The following question, a series is given, with one term missing. Choose the correct alternative from the given ones that will complete the series.

4, 10, 18, ?, 40

A. 24

B. 28

C. 32

D. 36

Answer: C



Watch Video Solution

98. The following question, a series is given, with one term missing. Choose the correct alternative from the given ones that will complete the series.

0, 3, 8, 15, ?, 35, 48

A. 26

B. 24

C. 22

D. 20

Answer: B



Watch Video Solution

99. The following question, a series is given, with one term missing. Choose the correct alternative from the given ones that

will complete the series.

19, 23, 26, 30, 33, ?

A. 31

B. 35

C. 37

D. 39

Answer: A



Watch Video Solution

100. The following question, a series is given, with one term missing. Choose the correct alternative from the given ones that will complete the series.

196, 16, 144, 36, 100, ?

A. 36

B. 64

C. 80

D. 100

Answer: B



Watch Video Solution

101. The following question, a series is given, with one term missing. Choose the correct alternative from the given ones that will complete the series.

121, ?, 169, 196, 225

A. 132

B. 136

C. 151

D. 144

Answer: D



Watch Video Solution

102. The following question, a series is given, with one term missing. Choose the correct alternative from the given ones that will complete the series.

125, 235, 345, 455, ?

A. 465

B. 565

C. 575

D. 665

Answer: B



Watch Video Solution

103. The following question, a series is given, with one term missing. Choose the correct alternative from the given ones that will complete the series.

15, 16, 20, 29, ?

A. 42

B. 45

C. 54

D. 38

Answer: B



Watch Video Solution

104. The following question, a series is given, with one term missing. Choose the correct alternative from the given ones that will complete the series.

2, 3, 6, 15, 42, ?

A. 84

B. 123

C. 94

D. 60

Answer: B



Watch Video Solution

105. The following question, a series is given, with one term missing. Choose the correct alternative from the given ones that will complete the series.

9, 17, 33, 65, ?

A. 99

B. 117

C. 119

D. 129

Answer: D



Watch Video Solution

106. The following question, a series is given, with one term missing. Choose the correct alternative from the given ones that

will complete the series.

6, 17, 39, 72, ?

A. 94

B. 127

C. 83

D. 116

Answer: D



Watch Video Solution

107. The following question, a series is given, with one term missing. Choose the correct alternative from the given ones that will complete the series.

138 , 161 , 185 , 210 ?

A. 240

B. 236

C. 272

D. 229

Answer: B



Watch Video Solution

108. The following question, a series is given, with one term missing. Choose the correct alternative from the given ones that will complete the series.

2, 6, 12, 20, 30, 42 ?

A. 52

B. 56

C. 60

D. 69

Answer: B



Watch Video Solution

109. The following question, a series is given, with one term missing. Choose the correct alternative from the given ones that will complete the series.

1, 3, 12, 60, ?

A. 360

B. 460

C. 560

D. 260

Answer: A



Watch Video Solution

110. The following question, a series is given, with one term missing. Choose the correct alternative from the given ones that will complete the series.

3, 4, 6, 6, 12, 8, 24, ?

A. 48

B. 10

C. 12

D. 36

Answer: B



Watch Video Solution

111. The following question, a series is given, with one term missing. Choose the correct alternative from the given ones that will complete the series.

24, 72, 120, ?

A. 144

B. 168

C. 192

D. 216

Answer: B



Watch Video Solution

112. The following question, a series is given, with one term missing. Choose the correct alternative from the given ones that will complete the series.

22, 28, 25, 31, 28, ?

A. 25

B. 34

C. 36

D. 39

Answer: B



Watch Video Solution

113. The following question, a series is given, with one term missing. Choose the correct alternative from the given ones that

will complete the series.

2, 4, 12, 48, ?

A. 224

B. 232

C. 240

D. 256

Answer: C



Watch Video Solution

114. The following question, a series is given, with one term missing. Choose the correct alternative from the given ones that will complete the series.

1, 8, 27, 64, ?

A. 343

B. 125

C. 216

D. 729

Answer: B



Watch Video Solution

115. The following question, a series is given, with one term missing. Choose the correct alternative from the given ones that will complete the series.

109, 74, 46, 25, 11, ?

A. 36

B. 0

C. 4

D. 11

Answer: C



Watch Video Solution

116. The following question, a series is given, with one term missing. Choose the correct alternative from the given ones that will complete the series.

3, 9, 4, 16, 5, 25, 7, ?

A. 64

B. 81

C. 49

D. 77

Answer: C



Watch Video Solution

117. The following question, a series is given, with one term missing. Choose the correct alternative from the given ones that will complete the series.

23, 29, 36, 44, ?

A. 58

B. 55

C. 53

D. 49

Answer: C



Watch Video Solution

118. The following question, a series is given, with one term missing. Choose the correct alternative from the given ones that will complete the series.

66, 56, 48, ?, 38, 36

A. 46

B. 44

C. 42

D. 40

Answer: C



Watch Video Solution

119. The following question, a series is given, with one term missing. Choose the correct alternative from the given ones that will complete the series.

6, 7, 15, 46, 185, ?

A. 926

B. 1851

C. 271

D. 230

Answer: A



Watch Video Solution

120. The following question, a series is given, with one term missing. Choose the correct alternative from the given ones that

will complete the series.

0, 7, 26, 63, ?

A. 196

B. 204

C. 212

D. 215

Answer: D



Watch Video Solution

121. The following question, a series is given, with one term missing. Choose the correct alternative from the given ones that will complete the series.

0,6,24,?, 120,210

A. 60

B. 62

C. 64

D. 66

Answer: A



Watch Video Solution

122. The following question, a series is given, with one term missing. Choose the correct alternative from the given ones that will complete the series.

2,6,8,14,22,36, ? ,94

A. 48

B. 49

C. 57

D. 58

Answer: D



Watch Video Solution

123. The following question, a series is given, with one term missing. Choose the correct alternative from the given ones that will complete the series.

0.01 , 0.04 , 0.09 , ?

A. 0.016

B. 1.6

C. 0.16

D. 0.106

Answer: C



Watch Video Solution

124. The following question, a series is given, with one term missing. Choose the correct alternative from the given ones that will complete the series.

3,5,6,11,9,17,12, ?

A. 20

B. 10

C. 22

D. 23

Answer: D



Watch Video Solution

125. The following question, a series is given, with one term missing. Choose the correct alternative from the given ones that will complete the series.

16,15,36,35,64 , ?

A. 25

B. 30

C. 34

D. 63

Answer: D



Watch Video Solution

126. The following question, a series is given, with one term missing. Choose the correct alternative from the given ones that will complete the series.

5, 7, ?, 10.5, 12.9, 15.3, 17.7

A. 7.9

B. 9.3

C. 8.1

D. 6.9

Answer: C



Watch Video Solution

127. The following question, a series is given, with one term missing. Choose the correct alternative from the given ones that

will complete the series.

$$0, \frac{3}{2}, 3, \frac{9}{2}, ?, \frac{15}{2}$$

A. $\frac{6}{2}$

B. $\frac{6}{3}$

C. 6

D. $\frac{3}{6}$

Answer: C



Watch Video Solution

128. The following question, a series is given, with one term missing. Choose the correct alternative from the given ones that will complete the series.

$$1, 121, 441, 961, 1681, ?$$

A. 2701

B. 3101

C. 2501

D. 2601

Answer: D



Watch Video Solution

129. The following question, a series is given, with one term missing. Choose the correct alternative from the given ones that will complete the series.

7,26,63,124,215,342, ?

A. 481

B. 511

C. 391

D. 421

Answer: B



Watch Video Solution

130. The following question, a series is given, with one term missing. Choose the correct alternative from the given ones that will complete the series.

2, 8, 16, 128, ?

A. 2041

B. 2045

C. 2046

D. 2048

Answer: D



Watch Video Solution

131. The following question, a series is given, with one term missing. Choose the correct alternative from the given ones that will complete the series.

$1 + 3, 6 + 3, 13 + 3, 22 + 3, ?$.

A. $33 + 4$

B. $33 + 3$

C. $34 + 3$

D. $43 + 3$

Answer: B



Watch Video Solution

132. The following question, a series is given, with one term missing. Choose the correct alternative from the given ones that will complete the series.

2, 6, 12, 20, ?

A. 30

B. 32

C. 38

D. 40

Answer: A



Watch Video Solution

133. The following question, a series is given, with one term missing. Choose the correct alternative from the given ones that will complete the series.

81, 192, 375, ?, 1029

A. 684

B. 486

C. 648

D. 468

Answer: C



Watch Video Solution

134. The following question, a series is given, with one term missing. Choose the correct alternative from the given ones that

will complete the series.

$2 + 2, 6 + 3, 12 + 4, 20 + 5, 30 + 6, ?$

A. $40 + 7$

B. $40 + 8$

C. $42 + 7$

D. $45 + 7$

Answer: C



Watch Video Solution

135. The following question, a series is given, with one term missing. Choose the correct alternative from a the given series that will complete the series.

$0, ?, 8, 27, 64, 125$

A. 1

B. 2

C. 3

D. 4

Answer: A



Watch Video Solution

136. The following question, a series is given, with one term missing. Choose the correct alternative from the given ones that will complete the series.

0, 7, 26, 63, ?

A. 125

B. 126

C. 124

D. 98

Answer: C



Watch Video Solution

137. The following question, a series is given, with one term missing. Choose the correct alternative from the given ones that will complete the series.

0, 6, 24, 60, ?

A. 90

B. 120

C. 84

D. 72

Answer: B



Watch Video Solution

138. The following question, a series is given, with one term missing. Choose the correct alternative from the given ones that will complete the series.

$$\frac{2}{3}, \frac{4}{7}, \frac{7}{13}, \frac{11}{21}, ?$$

A. $\frac{13}{25}$

B. $\frac{15}{29}$

C. $\frac{17}{33}$

D. $\frac{16}{31}$

Answer: D



Watch Video Solution

139. The following question, a series is given, with one term missing. Choose the correct alternative from the given ones that will complete the series.

2.1, 5.2, 8.4, 11.7, 15.1, ?

A. 17.1

B. 18.6

C. 18.4

D. 17.3

Answer: B



Watch Video Solution

140. The following question, a series is given, with one term missing. Choose the correct alternative from the given ones that will complete the series.

24, 6, 18, 9, 36, 9, 24, ?

A. 24

B. 12

C. 8

D. 6

Answer: B



Watch Video Solution

141. The following question, a series is given, with one term missing. Choose the correct alternative from the given ones that

will complete the series.

87, 90, 84, 88, 81, ?, ?

A. 85,93

B. 86,98

C. 86,78

D. 86,68

Answer: C



Watch Video Solution

142. The following question, a series is given, with one term missing. Choose the correct alternative from the given ones that will complete the series.

2, 12, 36, 80, 150, ?

A. 194

B. 210

C. 252

D. 258

Answer: C



Watch Video Solution

143. The following question, a series is given, with one term missing. Choose the correct alternative from the given ones that will complete the series.

2,8,18,32, 50 , ?

A. 72

B. 100

C. 98

D. 96

Answer: A



Watch Video Solution

144. The following question, a series is given, with one term missing. Choose the correct alternative from the given ones that will complete the series.

5, 11, 23, 47, 95, ?

A. 105

B. 145

C. 147

D. 191

Answer: D



Watch Video Solution

145. The following question, a series is given, with one term missing. Choose the correct alternative from the given ones that will complete the series.

1, 9, 25, 49, ?, 121

A. 81

B. 91

C. 64

D. 100

Answer: A



Watch Video Solution

146. The following question, a series is given, with one term missing. Choose the correct alternative from the given ones that will complete the series.

2, 8, 40, ?, 1680, 13440

A. 80

B. 120

C. 160

D. 240

Answer: D



Watch Video Solution

147. The following question, a series is given, with one term missing. Choose the correct alternative from the given ones that will complete the series.

0.2, 0.04, 0.006, ?

A. 0.007

B. 0.008

C. 0.0008

D. 0.0012

Answer: C



Watch Video Solution

148. The following question, a series is given, with one term missing. Choose the correct alternative from the given ones that

will complete the series.

2, 5, 11, 17, ?

A. 29

B. 23

C. 19

D. 13

Answer: A



Watch Video Solution

149. The following question, a series is given, with one term missing. Choose the correct alternative from the given ones that will complete the series.

2160, 432, 108, ?

A. 18

B. 36

C. 32

D. 54

Answer: B



Watch Video Solution

150. The following question, a series is given, with one term missing. Choose the correct alternative from the given ones that will complete the series.

6, 29, 121, _____, 1961

A. 429

B. 489

C. 484

D. 461

Answer: B



Watch Video Solution

151. The following question, a series is given, with one term missing. Choose the correct alternative from the given ones that will complete the series.

10, 14, 19, 25, _____

A. 32

B. 30

C. 31

D. 33

Answer: A



Watch Video Solution

152. The following question, a series is given, with one term missing. Choose the correct alternative from the given ones that will complete the series.

5, 11, 17, 25, 33, 43, ?

A. 53

B. 56

C. 49

D. 51

Answer: A



Watch Video Solution

153. The following question, a series is given, with one term missing. Choose the correct alternative from the given ones that will complete the series.

7, 16, 27, 40, 55, _____

A. 70

B. 72

C. 81

D. 66

Answer: B



Watch Video Solution

154. The following question, a series is given, with one term missing. Choose the correct alternative from the given ones that will complete the series.

720, 720, 360, 120, 30, 6, _____

A. 1

B. 2

C. 3

D. 5

Answer: A



Watch Video Solution

155. The following question, a series is given, with one term missing. Choose the correct alternative from the given ones that

will complete the series.

321, 301, _____, 181, 21

A. 281

B. 161

C. 241

D. 261

Answer: D



Watch Video Solution

156. The following question, a series is given, with one term missing. Choose the correct alternative from the given ones that will complete the series.

2816, _____, 176, 44, 11

A. 704

B. 1408

C. 352

D. 2640

Answer: A



Watch Video Solution

157. The following question, a series is given, with one term missing. Choose the correct alternative from the given ones that will complete the series.

1, 5, 21, 57, 121, ____

A. 150

B. 176

C. 200

D. 221

Answer: D



Watch Video Solution

158. The following question, a series is given, with one term missing. Choose the correct alternative from the given ones that will complete the series.

9, 17, 31, 57, _____, 205

A. 102

B. 104

C. 107

D. 109

Answer: C



Watch Video Solution

159. The following question, a series is given, with one term missing. Choose the correct alternative from the given ones that will complete the series.

6, 10, 18, 34, _____

A. 46

B. 56

C. 66

D. 76

Answer: C



Watch Video Solution

160. The following question, a series is given, with one term missing. Choose the correct alternative from the given ones that will complete the series.

13, 40, 122, 369 ____

A. 1110

B. 1111

C. 1112

D. 1113

Answer: B



Watch Video Solution

161. The following question, a series is given, with one term missing. Choose the correct alternative from the given ones that will complete the series.

436, 382, 337, 238, ____

A. 167

B. 159

C. 138

D. 148

Answer: D



Watch Video Solution

162. The following question, a series is given, with one term missing. Choose the correct alternative from the given ones that

will complete the series.

15, 17, 20, 22, 27, 29, ____, ____

A. 31, 38

B. 36, 38

C. 36, 43

D. 38, 45

Answer: B



Watch Video Solution

163. The following question, a series is given, with one term missing. Choose the correct alternative from the given ones that will complete the series.

6, ____, 15, 27, 51, 99

A. 10

B. 9

C. 11

D. 12

Answer: B



Watch Video Solution

164. The following question, a series is given, with one term missing. Choose the correct alternative from the given ones that will complete the series.

2, 5, 8, 11, 14, ?

A. 17

B. 16

C. 15

D. 18

Answer: A



Watch Video Solution

165. The following question, a series is given, with one term missing. Choose the correct alternative from the given ones that will complete the series.

113, 225, 449, ____ , 1793

A. 897

B. 789

C. 987

D. 978

Answer: B



Watch Video Solution

166. The following question, a series is given, with one term missing. Choose the correct alternative from the given ones that will complete the series.

230, 246, 271, 307, ____

A. 412

B. 356

C. 518

D. 612

Answer: B



Watch Video Solution

167. The following question, a series is given, with one term missing. Choose the correct alternative from the given ones that will complete the series.

97, 86, 99, 88, 101, ____, _____

A. 88, 89

B. 90, 103

C. 121, 108

D. 114, 103

Answer: B



Watch Video Solution

168. The following question, a series is given, with one term missing. Choose the correct alternative from the given ones that will complete the series.

14, 21, 30, 41, 54, _____

A. 61

B. 73

C. 69

D. 70

Answer: C



Watch Video Solution

169. The following question, a series is given, with one term missing. Choose the correct alternative from the given ones that

will complete the series.

17, 14, 15, 12, 13, 10, ____ , ____

A. 10,11

B. 14,11

C. 11, 8

D. 12,15

Answer: A



Watch Video Solution

170. The following question, a series is given, with one term missing. Choose the correct alternative from the given ones that will complete the series.

2, 5, 10, ____ , 26

A. 19

B. 21

C. 17

D. 25

Answer: C



Watch Video Solution

171. A series is given with one/two term missing. Choose the correct alternative from the given ones that will complete the series.

31, 37, 49, 67. ?

A. 87

B. 91

C. 89

D. 97

Answer: B



Watch Video Solution

172. A series is given with one/two term missing. Choose the correct alternative from the given ones that will complete the series.

365, 364, 355, 330, 281,?

A. 280

B. 200

C. 180

D. 120

Answer: B



Watch Video Solution

173. A series is given with one/two term missing. Choose the correct alternative from the given ones that will complete the series.

4, 5, 6, 9, 8, 13, 10, ?

A. 14

B. 15

C. 11

D. 17

Answer: D



Watch Video Solution

174. The following question, a series is given, with one term missing. Choose the correct alternative from the given ones that will complete the series.

56, 42, 30, 20, ____, 6

A. 15

B. 12

C. 18

D. 14

Answer: B



Watch Video Solution

175. The following question, a series is given, with one term missing. Choose the correct alternative from the given ones that will complete the series.

1, 6, 15, ?, 45, 66, 91

A. 25

B. 26

C. 27

D. 28

Answer: D



Watch Video Solution

176. The following question, a series is given, with one term missing. Choose the correct alternative from the given ones that

will complete the series.

6, 12, 20, 30, ?

A. 40

B. 41

C. 42

D. 48

Answer: C



Watch Video Solution

177. The following question, a series is given, with one term missing. Choose the correct alternative from the given ones that will complete the series.

24, 6, 18, 9, 36, 9, 24, ?

A. 24

B. 12

C. 8

D. 6

Answer: B



Watch Video Solution

178. The following question, a series is given, with one term missing. Choose the correct alternative from the given ones that will complete the series.

2, 6, 12, 20, ?

A. 18

B. 24

C. 20

D. 26

Answer: C



Watch Video Solution

179. The following question, a series is given, with one term missing. Choose the correct alternative from the given ones that will complete the series.

9, 16, 25, 36, ?, 64

A. 56

B. 49

C. 80

D. 72

Answer: B



Watch Video Solution

180. The following question, a series is given, with one term missing. Choose the correct alternative from the given ones that will complete the series.

3, 5, 8, 13, 21, 34, 55, ?

A. 34

B. 55

C. 21

D. 89

Answer: D



Watch Video Solution

181. The following question, a series is given, with one term missing. Choose the correct alternative from the given ones that will complete the series.

2, 6, 14, 26, ____ 62

A. 52

B. 54

C. 44

D. 42

Answer: D



Watch Video Solution

182. The following question, a series is given, with one term missing. Choose the correct alternative from the given ones that will complete the series.

6, 12, 21, 33, ___

A. 45

B. 48

C. 40

D. 46

Answer: B



Watch Video Solution

183. The following question, a series is given, with one term missing. Choose the correct alternative from the given ones that

will complete the series.

24, 29, 39, ?, 74

A. 49

B. 54

C. 44

D. 50

Answer: B



Watch Video Solution

184. The following question, a series is given, with one term missing. Choose the correct alternative from the given ones that will complete the series.

480, ?, 24, 8, 4

A. 98

B. 96

C. 104

D. 88

Answer: B



Watch Video Solution

185. The following question, a series is given, with one term missing. Choose the correct alternative from the given ones that will complete the series.

1, 49, 121, ?, 289

A. 529

B. 169

C. 329

D. 225

Answer: B



Watch Video Solution

186. The following question, a series is given, with one term missing. Choose the correct alternative from the given ones that will complete the series.

0, 2, 6, 12, 20, ____, 42

A. 34

B. 30

C. 32

D. 28

Answer: B



Watch Video Solution

187. The following question, a series is given, with one term missing. Choose the correct alternative from the given ones that will complete the series.

1, 9, 25, ?, 81

A. 36

B. 49

C. 64

D. 28

Answer: B



Watch Video Solution

188. The following question, a series is given, with one term missing. Choose the correct alternative from the given ones that will complete the series.

3, 6, 12, 21, ?, 48

A. 31

B. 33

C. 34

D. 38

Answer: B



Watch Video Solution

189. The following question, a series is given, with one term missing. Choose the correct alternative from the given ones that will complete the series.

169, 144, 121, 100, ?

A. 99

B. 74

C. 81

D. 101

Answer: C



Watch Video Solution

190. The following question, a series is given, with one term missing. Choose the correct alternative from the given ones that

will complete the series.

5, ? , 23, 47, 95, 191.

A. 13

B. 10

C. 17

D. 11

Answer: D



Watch Video Solution

191. The following question, a series is given, with one term missing. Choose the correct alternative from the given ones that will complete the series.

256, 16, 4, ?

A. 8

B. 6

C. 2

D. 4

Answer: C



Watch Video Solution

192. The following question, a series is given, with one term missing. Choose the correct alternative from the given ones that will complete the series.

1, 6, 13, 22, ?, 46

A. 32

B. 33

C. 40

D. 43

Answer: B



Watch Video Solution

193. The following question, a series is given, with one term missing. Choose the correct alternative from the given ones that will complete the series.

6, 11, 21, 26, 36, ?, 51

A. 41

B. 39

C. 47

D. 48

Answer: A



Watch Video Solution

194. The following question, a series is given, with one term missing. Choose the correct alternative from the given ones that will complete the series.

225, 289, ?, 441

A. 361

B. 375

C. 383

D. 386

Answer: A



Watch Video Solution

195. The following question, a series is given, with one term missing. Choose the correct alternative from the given ones that will complete the series.

4, 10, 22, 46, _____

A. 56

B. 66

C. 76

D. 94

Answer: D



Watch Video Solution

196. The following question, a series is given, with one term missing. Choose the correct alternative from the given ones that will complete the series.

2, 5, 9, __, 20, 27

A. 14

B. 16

C. 18

D. 24

Answer: A



Watch Video Solution

197. The following question, a series is given, with one term missing. Choose the correct alternative from the given ones that

will complete the series.

V, VIII, XI, XIV, ?, XX

A. XV

B. XVII

C. IX

D. XXIII

Answer: B



Watch Video Solution

198. The following question, a series is given, with one term missing. Choose the correct alternative from the given ones that will complete the series.

48, 82, 44, 77, 40, 72, _____

A. 76

B. 70

C. 36

D. 40

Answer: C



Watch Video Solution

199. The following question, a series is given, with one term missing. Choose the correct alternative from the given ones that will complete the series.

7, 8, 10, 13, 17, ___

A. 22

B. 21

C. 23

D. 20

Answer: A



Watch Video Solution

200. The following question, a series is given, with one term missing. Choose the correct alternative from the given ones that will complete the series.

69, 72, 78, 87, ____, 114

A. 111

B. 99

C. 93

D. 96

Answer: B



Watch Video Solution

201. The following question, a series is given, with one term missing. Choose the correct alternative from the given ones that will complete the series.

62, 61, 63, 62, 64, 63, ____

A. 66

B. 62

C. 64

D. 65

Answer: D



Watch Video Solution

202. The following question, a series is given, with one term missing. Choose the correct alternative from the given ones that will complete the series.

70, 71, 76, __, 81, 86, 70, 91

A. 96

B. 70

C. 80

D. 71

Answer: B



Watch Video Solution

203. The following question, a series is given, with one term missing. Choose the correct alternative from the given ones that will complete the series.

36, 34, 30, 28, 24, ____

A. 22

B. 23

C. 26

D. 20

Answer: A



Watch Video Solution

204. The following question, a series is given, with one term missing. Choose the correct alternative from the given ones that

will complete the series.

1, 4, 9, 16, 25, _____, 49

A. 36

B. 64

C. 81

D. 27

Answer: A



Watch Video Solution

205. The following question, a series is given, with one term missing. Choose the correct alternative from the given ones that will complete the series.

1.5, 2.3, 3.1, 3.9, ?

A. 3.12

B. 4.7

C. 4.9

D. 5.1

Answer: B



Watch Video Solution

206. The following question, a series is given, with one term missing. Choose the correct alternative from the given ones that will complete the series.

14, 28, 20, 40, 32, 64, ?

A. 52

B. 56

C. 128

D. 48

Answer: B



Watch Video Solution

207. The following question, a series is given, with one term missing. Choose the correct alternative from the given ones that will complete the series.

36, 34, 30, 28, 24, ____

A. 20

B. 22

C. 23

D. 26

Answer: B



Watch Video Solution

208. The following question, a series is given, with one term missing. Choose the correct alternative from the given ones that will complete the series.

1000, 200, 40, ?

A. 10

B. 20

C. 15

D. 8

Answer: D



Watch Video Solution

209. The following question, a series is given, with one term missing. Choose the correct alternative from the given ones that will complete the series.

4320, 720, ?, 36, 12, 6

A. 144

B. 24

C. 72

D. 48

Answer: A



Watch Video Solution

210. The following question, a series is given, with one term missing. Choose the correct alternative from the given ones that will complete the series.

39, 169, 299, ?

A. 339

B. 429

C. 519

D. 609

Answer: B



Watch Video Solution

211. The following question, a series is given, with one term missing. Choose the correct alternative from the given ones that

will complete the series.

113, 128, 161, 185, ?

A. 209

B. 218

C. 227

D. 200

Answer: C



Watch Video Solution

212. The following question, a series is given, with one term missing. Choose the correct alternative from the given ones that will complete the series.

2, 5, 7, 12, 19, 31, ____, 81

A. 30

B. 40

C. 50

D. 60

Answer: C



Watch Video Solution

213. The following question, a series is given, with one term missing. Choose the correct alternative from the given ones that will complete the series.

3, 5, 6, 11, 9, 17, 12, ____

A. 20

B. 10

C. 22

D. 23

Answer: D



Watch Video Solution

214. The following question, a series is given, with one term missing. Choose the correct alternative from the given ones that will complete the series.

5, 22, 107, _ , 2657

A. 230

B. 1627

C. 728

D. 532

Answer: A



Watch Video Solution

215. The following question, a series is given, with one term missing. Choose the correct alternative from the given ones that will complete the series.

6, 24, 12, ____, 18, 8, 24, 0

A. 14

B. 18

C. 16

D. 20

Answer: D



Watch Video Solution

216. The following question, a series is given, with one term missing. Choose the correct alternative from the given ones that will complete the series.

206, 221, 251, 296, 356, ____

A. 416

B. 426

C. 431

D. 430

Answer: A



Watch Video Solution

217. The following question, a series is given, with one term missing. Choose the correct alternative from the given ones that will complete the series.

5, 17, 37, 65, _____, 145

A. 95

B. 97

C. 99

D. 101

Answer: A



Watch Video Solution

218. The following question, a series is given, with one term missing. Choose the correct alternative from the given ones that

will complete the series.

33, 48, 65, 84, ____, ____

A. 105, 128

B. 99, 110

C. 101, 118

D. 105, 126

Answer: C



Watch Video Solution

219. The following question, a series is given, with one term missing. Choose the correct alternative from the given ones that will complete the series.

2, 10, 26, 50, ____

A. 74

B. 50

C. 78

D. 82

Answer: A



Watch Video Solution

220. The following question, a series is given, with one term missing. Choose the correct alternative from the given ones that will complete the series.

0, 7, ?, 63, 124

A. 26

B. 24

C. 23

D. 22

Answer: D



Watch Video Solution

221. The following question, a series is given, with one term missing. Choose the correct alternative from the given ones that will complete the series.

12, 36, 108, 324, ?

A. 972

B. 648

C. 1296

D. 432

Answer: B



Watch Video Solution

222. The following question, a series is given, with one term missing. Choose the correct alternative from the given ones that will complete the series.

53, 40, 27, _____

A. 53

B. 12

C. 14

D. 27

Answer: A



Watch Video Solution

223. The following question, a series is given, with one term missing. Choose the correct alternative from the given ones that will complete the series.

6, 20, 8, 14, 10, 8, 12, ____

A. 2

B. 4

C. 10

D. 14

Answer: D



Watch Video Solution

224. The following question, a series is given, with one term missing. Choose the correct alternative from the given ones that will complete the series.

33,66,99, ?

A. 133

B. 130

C. 131

D. 132

Answer: A



Watch Video Solution

225. The following question, a series is given, with one term missing. Choose the correct alternative from the given ones that

will complete the series.

4, 18, 48, _____, 180

A. 80

B. 100

C. 105

D. 125

Answer: B



Watch Video Solution

226. The following question, a series is given, with one term missing. Choose the correct alternative from the given ones that will complete the series.

3, 11, 38, 102, _____, 443

A. 227

B. 237

C. 247

D. 217

Answer: D



Watch Video Solution

227. The following question, a series is given, with one term missing. Choose the correct alternative from the given ones that will complete the series.

3.5, 7, 10.5, 14, ?

A. 15.5

B. 16.5

C. 18.5

D. 17.5

Answer: A



Watch Video Solution

228. The following question, a series is given, with one term missing. Choose the correct alternative from the given ones that will complete the series.

7, 12, 19, 28, 39, ?

A. 52

B. 50

C. 51

D. 48

Answer: A



Watch Video Solution

229. The following question, a series is given, with one term missing. Choose the correct alternative from the given ones that will complete the series.

1, 3, 7, 13, 21, 31, 43, ?

A. 55

B. 57

C. 59

D. 61

Answer: A



Watch Video Solution

230. The following question, a series is given, with one term missing. Choose the correct alternative from the given ones that will complete the series.

0.5, 2, 4.5, 8, 12.5, _____

A. 17

B. 16

C. 16.5

D. 18

Answer: A



Watch Video Solution

231. The following question, a series is given, with one term missing. Choose the correct alternative from the given ones that will complete the series.

3, 6, 18, 21, 63, 66, _____

A. 181

B. 160

C. 147

D. 198

Answer: B



Watch Video Solution

232. A series is given, with one term missing. Choose the correct alternative from the given ones that will complete the series.

510, 322, 404.?

A. 422

B. 371

C. 629

D. 819

Answer: C



Watch Video Solution

233. The following question, a series is given, with one term missing. Choose the correct alternative from the given ones that will complete the series.

15, 14, 12, 9, 5, 0, _____

A. — 11

B. -15

C. -6

D. -7

Answer: C



Watch Video Solution

234. The following question, a series is given, with one term missing. Choose the correct alternative from the given ones that will complete the series.

26, 22, 20, 16, 14, ?

A. 8

B. 4

C. 12

D. 10

Answer: D



Watch Video Solution

235. The following question, a series is given, with one term missing. Choose the correct alternative from the given ones that will complete the series.

15, 23, 31, 39, ____ , 54, 61

A. 47

B. 46

C. 44

D. 45

Answer: A



Watch Video Solution

236. The following question, a series is given, with one term missing. Choose the correct alternative from the given ones that will complete the series.

2, 3.5, 5, 6.5, 8, ____

A. 9.5

B. 10.5

C. 11.0

D. 9.0

Answer: A



Watch Video Solution

237. The following question, a series is given, with one term missing. Choose the correct alternative from the given ones that will complete the series.

32, 58, 92, 134, ___

A. 184

B. 194

C. 156

D. 169

Answer: A



Watch Video Solution

238. The following question, a series is given, with one term missing. Choose the correct alternative from the given ones that will complete the series.

5,13,29,61,125, _____

A. 253

B. 196

C. 245

D. 145

Answer: A



Watch Video Solution

239. The following question, a series is given, with one term missing. Choose the correct alternative from the given ones that

will complete the series.

61, 52, 63, 94, 46, ___

A. 19

B. 18

C. 17

D. None

Answer: B



Watch Video Solution

240. The following question, a series is given, with one term missing. Choose the correct alternative from the given ones that will complete the series.

13, 10, ___ 100, 1003, 1000, 10003.

A. 1030

B. 1130

C. 103

D. 130

Answer: C



Watch Video Solution

241. In each of the following questions, a series is given, with one term missing. Choose the correct alternative from the given ones that will complete the series.

120, 440, 960, 1680, ?

A. 2600

B. 3240

C. 3040

D. 2400

Answer: A



Watch Video Solution

242. The following question, a series is given, with one term missing. Choose the correct alternative from the given ones that will complete the series.

5, 16, 51, 158, ?

A. 1454

B. 1452

C. 483

D. 481

Answer: D



Watch Video Solution

243. The following question, a series is given, with one term missing. Choose the correct alternative from the given ones that will complete the series.

198 , 202, 211, 227, _____

A. 236

B. 252

C. 275

D. 245

Answer: B



Watch Video Solution

244. The following question, a series is given, with one term missing. Choose the correct alternative from the given ones that will complete the series.

7, 25, 61, 121, _____

A. 210

B. 211

C. 212

D. 209

Answer: B



Watch Video Solution

245. The following question, a series is given, with one term missing. Choose the correct alternative from the given ones that will complete the series.

125, 80, 45, 20, ?

A. 8

B. 12

C. 10

D. 5

Answer: D



Watch Video Solution

246. The following question, a series is given, with one term missing. Choose the correct alternative from the given ones that

will complete the series.

2,3,5,7,____,13

A. 9

B. 11

C. 8

D. 12

Answer: B



Watch Video Solution

247. The following question, a series is given, with one term missing. Choose the correct alternative from the given ones that will complete the series.

1, 2, 5, 10, 17, _____

A. 19

B. 21

C. 25

D. 26

Answer: D



Watch Video Solution

248. The following question, a series is given, with one term missing. Choose the correct alternative from the given ones that will complete the series.

17, 43, 81, 131, _____

A. 300

B. 193

C. 375

D. 468

Answer: B



Watch Video Solution

249. In the following questions, a series is given, with one term missing. Choose the correct alternative from the given ones.

5, 11, 23, 47, 95 _____.

A. 161

B. 169

C. 190

D. 191

Answer: D



Watch Video Solution

250. The following question, a series is given, with one term missing. Choose the correct alternative from the given ones that will complete the series.

20,29, 38,47, _____

A. 52

B. 58

C. 59

D. 56

Answer: D



Watch Video Solution

251. The following question, a series is given, with one term missing. Choose the correct alternative from the given ones that will complete the series.

3917, 3526, ____, 2857

A. 3174

B. 3389

C. 2682

D. 3082

Answer: A



Watch Video Solution

252. The following question, a series is given, with one term missing. Choose the correct alternative from the given ones that will complete the series.

5, 11, 24, 51, 106, _____

A. 122

B. 217

C. 221

D. 115

Answer: B



Watch Video Solution

253. The following question, a series is given, with one term missing. Choose the correct alternative from the given ones that

will complete the series.

0, 6, 24, 60, ?

A. 117

B. 119

C. 120

D. 153

Answer: C



Watch Video Solution

254. In each of the following questions, a series is given, with one term missing. Choose the correct alternative from the given ones that will complete the series.

50, 65, 82, ?, 122

A. 101

B. 97

C. 105

D. 100

Answer: A



Watch Video Solution

255. In the following questions, a series is given with one term missing. Choose the correct alternative from the given ones that will complete the series.

4, 3, 2.5, 2.25, ?

A. 1

B. 1.125

C. 2

D. 2.125

Answer: D



Watch Video Solution

256. The following question, a series is given, with one term missing. Choose the correct alternative from the given ones that will complete the series.

2311, 4529, ? , 8989

A. 7243

B. 6353

C. 5662

D. 6755

Answer: D



Watch Video Solution

257. The following question, a series is given, with one term missing. Choose the correct alternative from the given ones that will complete the series.

21, 30, 38, ?, 51, 56, 60

A. 80

B. 35

C. 55

D. 45

Answer: D



Watch Video Solution

258. The following question, a series is given, with one term missing. Choose the correct alternative from the given ones that will complete the series.

6,14,30, ?

A. 54

B. 29

C. 27

D. 33

Answer: A



Watch Video Solution

259. The following question, a series is given, with one term missing. Choose the correct alternative from the given ones that will complete the series.

95, 115, 145, 155, ?

A. 215

B. 175

C. 185

D. 165

Answer: B



Watch Video Solution

260. The following question, a series is given, with one term missing. Choose the correct alternative from the given ones that

will complete the series.

1, 3, 8, 19, 42, ___

A. 65

B. 71

C. 89

D. 93

Answer: C



Watch Video Solution

261. The following question, a series is given, with one term missing. Choose the correct alternative from the given ones that will complete the series.

4, 18, 48, _____, 180

A. 80

B. 100

C. 105

D. 125

Answer: B



Watch Video Solution

262. The following question, a series is given, with one term missing. Choose the correct alternative from the given ones that will complete the series.

4, 8, 16, 32, _____, 128

A. 64

B. 46

C. 112

D. 120

Answer: A



Watch Video Solution

263. The following question, a series is given, with one term missing. Choose the correct alternative from the given ones that will complete the series.

8, 16, 28, 44, ?

A. 62

B. 64

C. 66

D. 60

Answer: B



Watch Video Solution

264. The following question, a series is given, with one term missing. Choose the correct alternative from the given ones that will complete the series.

0, 3, 8, 15, 24, ?, 48

A. 41

B. 29

C. 37

D. 35

Answer: D



Watch Video Solution

265. In each of the following questions, a series is given, with one term missing. Choose the correct alternative from the given ones that will complete the series

2, 20, 56, 110, ?

A. 132

B. 144

C. 182

D. 115

Answer: C



Watch Video Solution

266. In each of the following questions, a series is given, with one term missing. Choose the correct alternative from the given ones that will complete the series

121, 222, 424, ?

A. 646

B. 828

C. 626

D. 524

Answer: B



Watch Video Solution

267. The following question, a series is given, with one term missing. Choose the correct alternative from the given ones that

will complete the series.

2, 3, 5, 9, 17, _____

A. 31

B. 32

C. 33

D. 34

Answer: C



Watch Video Solution

268. The following question, a series is given, with one term missing. Choose the correct alternative from the given ones that will complete the series.

7, 12, 22, 42, 82, _____

A. 173

B. 162

C. 183

D. 143

Answer: B



Watch Video Solution

269. The following question, a series is given, with one term missing. Choose the correct alternative from the given ones that will complete the series.

3, 6, 9, 15, 24, 39, 63, ___

A. 100

B. 87

C. 102

D. 99

Answer: C



Watch Video Solution

270. The following question, a series is given, with one term missing. Choose the correct alternative from the given ones that will complete the series.

— 1, 0, ___, 8, 15, 24

A. 4

B. 3

C. 2

D. 1

Answer: B



Watch Video Solution

271. The following question, a series is given, with one term missing. Choose the correct alternative from the given ones that will complete the series.

2, 3, 5, 6, 7, 9, 10, 11, 13, ____

A. 12

B. 15

C. 14

D. 16

Answer: C



Watch Video Solution

272. The following question, a series is given, with one term missing. Choose the correct alternative from the given ones that will complete the series.

22, 31, 42, 55, ____, 87

A. 64

B. 70

C. 72

D. 68

Answer: B



Watch Video Solution

273. The following question, a series is given, with one term missing. Choose the correct alternative from the given ones that will complete the series.

512, 256, 128, ?, 32, 16, 8

A. 52

B. 61

C. 64

D. 56

Answer: C



Watch Video Solution

274. The following question, a series is given, with one term missing. Choose the correct alternative from the given ones that

will complete the series.

30, 130, 630, ___

A. 1260

B. 3130

C. 1030

D. 3103

Answer: B



Watch Video Solution

275. The following question, a series is given, with one term missing. Choose the correct alternative from the given ones that will complete the series.

5, 11, 21, 43, 85, ____

A. 185

B. 170

C. 171

D. 181

Answer: C



Watch Video Solution

276. The following question, a series is given, with one term missing. Choose the correct alternative from the given ones that will complete the series.

12, 27, 85, 345, ____

A. 1737

B. 1380

C. 1725

D. 1731

Answer: D



Watch Video Solution

277. The following question, a series is given, with one term missing. Choose the correct alternative from the given ones that will complete the series.

0, ____, 8, 27, 64, 125

A. 5

B. 4

C. 2

D. 1

Answer: D



Watch Video Solution

278. The following question, a series is given, with one term missing. Choose the correct alternative from the given ones that will complete the series.

1, 5, 25, 125, _____, _____, _____

A. 245, 485, 965

B. 225, 325, 425

C. 625, 3225, 15605

D. 625, 3125, 15625

Answer: D



Watch Video Solution

279. The following question, a series is given, with one term missing. Choose the correct alternative from the given ones that will complete the series.

2, 2, 4, 6, _____, 10, 8, 14, 10

A. 6

B. 5

C. 8

D. 7

Answer: A



Watch Video Solution

280. The following question, a series is given, with one term missing. Choose the correct alternative from the given ones that will complete the series.

3, 8, 18, 35, ____ , 98

A. 61

B. 71

C. 41

D. 51

Answer: A



Watch Video Solution

281. The following question, a series is given, with one term missing. Choose the correct alternative from the given ones that

will complete the series.

17, 13, 11, 7, 5, ____

A. 0

B. 1

C. 2

D. 3

Answer: B



Watch Video Solution

282. The following question, a series is given, with one term missing. Choose the correct alternative from the given ones that will complete the series.

4, 9, 19, 39, ____

A. 49

B. 59

C. 79

D. 89

Answer: C



Watch Video Solution

283. The following question, a series is given, with one term missing. Choose the correct alternative from the given ones that will complete the series.

3, 6, 8, 16, 18, ____

A. 28

B. 34

C. 36

D. 54

Answer: C



Watch Video Solution

284. The following question, a series is given, with one term missing. Choose the correct alternative from the given ones that will complete the series.

9, 15, 23, 33, ?

A. 44

B. 36

C. 38

D. 45

Answer: D



Watch Video Solution

285. The following question, a series is given, with one term missing. Choose the correct alternative from the given ones that will complete the series.

4, 7, 14, 24, 41, ?

A. 71

B. 68

C. 72

D. 51

Answer: B



Watch Video Solution

286. The following question, a series is given, with one term missing. Choose the correct alternative from the given ones that will complete the series.

5, 16, 51, 158, ?

A. 481

B. 465

C. 441

D. 478

Answer: A



Watch Video Solution

287. The following question, a series is given, with one term missing. Choose the correct alternative from the given ones that will complete the series.

Select the missing number from the given responses.

1 4 2 3 2 ?

A. 2

B. 3

C. 4

D. 5

Answer: D



Watch Video Solution

288. The following question, a series is given, with one term missing. Choose the correct alternative from the given ones that will complete the series.

68, 81, 96, ____ , 132

A. 105

B. 110

C. 113

D. 130

Answer: C



Watch Video Solution

289. The following question, a series is given, with one term missing. Choose the correct alternative from the given ones that

will complete the series.

121, 253, 374, 495, _____

A. 565

B. 523

C. 5116

D. 5102

Answer: C



Watch Video Solution

290. The following question, a series is given, with one term missing. Choose the correct alternative from the given ones that will complete the series.

3, 15, 4, 16, 5, 17, 6, _____, 7

A. 12

B. 13

C. 15

D. 18

Answer: D



Watch Video Solution

291. The following question, a series is given, with one term missing. Choose the correct alternative from the given ones that will complete the series.

1, 8, 17, 30, ?, 76

A. 39

B. 49

C. 59

D. 69

Answer: B



Watch Video Solution

292. The following question, a series is given, with one term missing. Choose the correct alternative from the given ones that will complete the series.

12, 8, 14, 6, 16, ?

A. 18

B. 32

C. 5

D. 4

Answer: D



Watch Video Solution

293. The following question, a series is given, with one term missing. Choose the correct alternative from the given ones that will complete the series.

1, 6, 13, 22, ?, 46

A. 47

B. 43

C. 46

D. 44

Answer: C



Watch Video Solution

294. The following question, a series is given, with one term missing. Choose the correct alternative from the given ones that will complete the series.

30, 24, 19, 15, 12, ?

A. 6

B. 8

C. 10

D. 11

Answer: C



Watch Video Solution

295. The following question, a series is given, with one term missing. Choose the correct alternative from the given ones that will complete the series.

2, 7, 17, 32, 52, 77, ?

A. 107

B. 91

C. 101

D. 92

Answer: A



Watch Video Solution

296. The following question, a series is given, with one term missing. Choose the correct alternative from the given ones that

will complete the series.

30, 28, 23, 21, ?

A. 15

B. 16

C. 18

D. 20

Answer: B



Watch Video Solution

297. The following question, a series is given, with one term missing. Choose the correct alternative from the given ones that will complete the series.

1, 2, 6, 24, ____, 720

A. 3

B. 5

C. 120

D. 8

Answer: C



Watch Video Solution

298. The following question, a series is given, with one term missing. Choose the correct alternative from the given ones that will complete the series.

156, 506, _____, 1806

A. 1056

B. 856

C. 1456

D. 1506

Answer: A



Watch Video Solution

299. The following question, a series is given, with one term missing. Choose the correct alternative from the given ones that will complete the series.

8, 24, 40, 56, _____, 88

A. 76

B. 72

C. 70

D. 74

Answer: B



Watch Video Solution

300. The following question, a series is given, with one term missing. Choose the correct alternative from the given ones that will complete the series.

1, 2, 6, 24, 120, _____

A. 360

B. 720

C. 600

D. 640

Answer: B



Watch Video Solution

301. The following question, a series is given, with one term missing. Choose the correct alternative from the given ones that will complete the series.

1, 8, 27, 64, ?

A. 37

B. 47

C. 57

D. 64

Answer: D



Watch Video Solution

302. In the following question, a series is given, with one term missing. Choose the correct alternative from the given ones that will complete the series.

25, 35, 55, ?, 125

A. 65

B. 75

C. 85

D. 95

Answer: C



Watch Video Solution

303. The following question, choose the correct alternative from the given ones the will complete the series.

$7\frac{1}{7}, 8\frac{2}{6}, 9\frac{5}{5}, 12\frac{2}{4}, 16\frac{2}{3}, \text{-----}$

A. $35\frac{3}{4}$

B. $16\frac{4}{7}$

C. $\frac{50}{2}$

D. $15\frac{2}{4}$

Answer: C



Watch Video Solution

304. The following question, choose the correct alternative from the given ones the will complete the series.

24, 35, 20, 31, 16, 27, __, __

A. 12,23

B. 5,30

C. 8,25

D. 9,9

Answer: A



Watch Video Solution

305. In the following questions, choose the correct alternative from the given ones that will complete the series.

1, 2, 5, 26, ?

A. 677

B. 252

C. 526

D. 125

Answer: A



Watch Video Solution

306. The following question, a series is given, with one term missing. Choose the correct alternative from the given ones that will complete the series.

0,6,24,?, 120,210

A. 240

B. 336

C. 504

D. 290

Answer: B



Watch Video Solution

307. In the following two questions, a series is given, with one term missing. Choose the correct alternative from the given ones that will complete the series.

3, 5, 9, 17, ?

A. 42

B. 26

C. 65

D. 33

Answer: D



Watch Video Solution

308. In the following two questions, a series is given, with one term missing. Choose the correct alternative from the given ones that will complete the series.

4, 6, 10, 16, 24, ?

A. 40

B. 28

C. 30

D. 34

Answer: D



Watch Video Solution

309. In the following questions, a series is given, with one term missing. Choose the correct alternative from the given ones that

will complete the series .

1, 2, 2, 4, 3, 8, 7, 10, ?

A. 11

B. 13

C. 9

D. 8

Answer: A



Watch Video Solution

310. The following question, a series is given, with one term missing. Choose the correct alternative from the given ones that will complete the series.

0, 7, ?, 63, 124

A. 123

B. 87

C. 96

D. 124

Answer: D



Watch Video Solution

311. 12 __ 41 ___ 34123 ___ 234

A. 3241

B. 2134

C. 1432

D. 3212

Answer: A



Watch Video Solution

312. Find the missing number :

2, 5, 10, 17, 26, _____

A. 49

B. 47

C. 37

D. 36

Answer: C



Watch Video Solution

313. Find the missing number in given series

3, 5, 35, 10, 12, 35, __, __

A. 19, 35

B. 17, 19

C. 19, 24

D. 22, 35

Answer: B



Watch Video Solution

314. Find the missing number in the given series?

36, 34, 30, 28, 24, ?

A. 20

B. 26

C. 22

D. 23

Answer: C



Watch Video Solution

315. Find the missing term ?

325, 259, 204, 160, 127, 105, ?

A. 94

B. 96

C. 98

D. 100

Answer: A



Watch Video Solution

316. Find the missing number in the given series

0.15, 0.3, _____, 1.2, 2.4

A. 0.6

B. 0.9

C. 0.06

D. 4.8

Answer: A



Watch Video Solution

317. 3, 8, 10, 15, 17, 22, 24, ?, ?

A. 26, 28

B. 29, 31

C. 29, 32

D. 29, 34

Answer: B



Watch Video Solution

318. 1, 5, 13, 25, 41, 61, ____

A. 85

B. 77

C. 81

D. 91

Answer: A



Watch Video Solution

319. 1, 16, 81, 256, 625, ____

A. 1225

B. 4163

C. 2225

D. 1296

Answer: D



Watch Video Solution

320. In the following questions, a series is given, with one term missing. Choose the correct alternative from the given ones that will complete the series.

361, ____, 169, 121, 49, 25

A. 196

B. 256

C. 324

D. 289

Answer: D



Watch Video Solution

321. In the following questions, a series is given, with one term missing. Choose the correct alternative from the given ones that

will complete the series.

127, 131 , 139 , ____, 151, 157, 163, 167

A. 149

B. 147

C. 141

D. 143

Answer: C



Watch Video Solution

322. In the following questions, a series is given, with one term missing. Choose the correct alternative from the given ones that will complete the series.

1, 2, 3, 5, ____, 13, 21

A. 6

B. 9

C. 7

D. 8

Answer: D



Watch Video Solution

323. Select the option that will correctly replace the question mark (?) in the series.

7, 18, 40, 73, ?

A. 183

B. 150

C. 161

D. 172

Answer: D



Watch Video Solution

324. Complete the given series 3, 5, 9, 15, 23, 33, 45, 59, _____

A. 81

B. 60

C. 75

D. 72

Answer: C



Watch Video Solution

325. 16, 61, 25, 52, 36, 63, 49, _____

A. 94

B. 36

C. 46

D. 72

Answer: A



Watch Video Solution

326. In following series find 20th number.

9, 5, 1, -3 , -7 , -11 ,

A. -67

B. -64

C. -75

D. -70

Answer: A



Watch Video Solution

327. 4, 11, 17, 22, _____, 29, 31, 32

A. 24

B. 26

C. 27

D. 23

Answer: B



Watch Video Solution

328. 1, 48, 4, 24, 7, _____, 10, 2

A. 8

B. 2

C. 18

D. 12

Answer: A



Watch Video Solution

329. A number series is given below with one number missing, shown by a "?". Choose from the options the correct alternative that will fit the pattern of the series

4, 9, 19, ?, 79, 159

A. 10

B. 8

C. 12

D. 9

Answer: D



Watch Video Solution

330. 16, 30, ____, 79, 114

A. 45

B. 49

C. 63

D. 51

Answer: D



Watch Video Solution

331. 6, 2, 9, 4, 12, _____

A. 8,24

B. 13,5

C. 4,13

D. 6,15

Answer: D



Watch Video Solution

332. The following question, a series is given, with one term missing. Choose the correct alternative from the given ones that will complete the series.

— 1, 0, ___, 8, 15, 24

A. 25

B. 26

C. 23

D. 24

Answer: D



Watch Video Solution

333. Complete the given series 1001, 1004, 1012, 1027, _____

A. 1051

B. 1050

C. 1048

D. 1036

Answer: A



Watch Video Solution

334. 8, 13, 18, 23, ____, 33, 38

A. 28

B. 23

C. 26

D. 33

Answer: A



Watch Video Solution

335. Complete the given series 8, 24, _____, 80, 120

A. 48

B. 40

C. 54

D. 72

Answer: A



Watch Video Solution

336. Complete the given series 1, 5, 21, 57, _____, 221

A. 96

B. 108

C. 121

D. 126

Answer: C



Watch Video Solution

337. Find the Number Series

720, 180, 176, 44, 40, 10, ?, ?

A. 6,1.5

B. 4,2

C. 6,1.5

D. 8,6



Watch Video Solution

338. 5, 10, 20, 40, 80, ?

A. 120

B. 140

C. 150

D. 160

Answer: D



Watch Video Solution

339. In the following questions, a series is given, with one term missing. Choose the correct alternative from the given ones that will complete the series.

5, 8, 16, 19, 38, 41, ____

A. 80

B. 40

C. 82

D. 44

Answer: C



Watch Video Solution

340. In the following questions, a series is given, with one term missing. Choose the correct alternative from the given ones that

will complete the series.

826, 480, 346, 134, _____

A. 61

B. 212

C. 126

D. 83

Answer: B



Watch Video Solution

341. In the following questions, a series is given, with one term missing. Choose the correct alternative from the given ones that will complete the series.

78, 155, 309, ___, 1233

A. 1230

B. 1000

C. 617

D. 625

Answer: C



Watch Video Solution

342. A series is given, with one term missing. Choose the correct alternative from the given ones that will complete the series.

6, 10, 18, 34, ?, 130

A. 78

B. 52

C. 66

D. 94

Answer: C



Watch Video Solution

343. A series is given, with one term missing. Choose the correct alternative from the given ones that will complete the series.

1, 2, 4, 7, ?, 16

A. 14

B. 8

C. 11

D. 15

Answer: C



Watch Video Solution

344. In the following question, a series is given with one or more number(s)/alphabet missing. Choose the correct alternative from the given options.

7, 10, 19, 22, 31, ?

A. 32

B. 34

C. 36

D. 44

Answer: B

345. In the following question, a series is given with one number missing. Choose the correct alternative from the given options.

16, 33, 53, 76, 102, ?

A. 131

B. 135

C. 230

D. 231

Answer: A



Watch Video Solution

346. Observe the series and figure out the patten used to form it. What will be the next term of the series?

1, 3, 6, 10, 15, ?

A. 32

B. 36

C. 42

D. 21

Answer: B



Watch Video Solution

347. Observe the series and figure out the pattern used to form it. What will be the 3rd term of the series?

1, 5, ____, 22, 35

A. 11

B. 14

C. 10

D. 12

Answer: D



Watch Video Solution

348. The following question, a series is given, with one term missing. Choose the correct alternative from the given ones that will complete the series.

1, 9, 25, 49, ?, 121

A. 83

B. 91

C. 121

D. 73

Answer: C



Watch Video Solution

349. The following question, a series is given, with one term missing. Choose the correct alternative from the given ones that will complete the series.

1, 2, 4, 8, ?

A. 128

B. 198

C. 256

D. 312

Answer: C



Watch Video Solution

350. The following question, a series is given, with one term missing. Choose the correct alternative from the given ones that will complete the series.

206, 221, 251, 296, 356, ____

A. 326

B. 356

C. 311

D. 341

Answer: B



Watch Video Solution

351. A series is given, with one term missing. Choose the correct alternative from the given ones that will complete the series.

4, 9, 16, 25, 36, ?

A. 49

B. 56

C. 21

D. 94

Answer: A



Watch Video Solution

352. In the following questions, a series is given, with one/two term missing. Choose the correct alternative from the given

ones that will complete the series.

6, 6, 10, 11, 14, 16, 18, _____

A. 23

B. 19

C. 21

D. 20

Answer: C



Watch Video Solution

353. In the following questions, a series is given, with one/two term missing. Choose the correct alternative from the given ones that will complete the series.

4, 6, 8, 12, 14, 18, 20, 24, 30, _____, _____

A. 32, 34

B. 34, 36

C. 32, 38

D. 32, 33

Answer: C



Watch Video Solution

354. In the following question, a series is given with one or more number (s) missing. Choose the correct alternative from the given options.

0.2, 0.16, 0.072, 0.0256, ?

A. 0.0016

B. 0.004

C. 0.00512

D. 0.008

Answer: D



Watch Video Solution

355. In the following question, a series is given with one or more number(s) missing. Choose the correct alternative from the given options.

7, 51, 8, 65, 9, ?

A. 79

B. 80

C. 81

D. 82

Answer: C



Watch Video Solution

356. In the following question, a series is given with one or more number(s) missing. Choose the correct alternative from the given options ?

? 5, 30, 186, 1309, 10480

A. 0.25

B. 0.75

C. 1.00

D. 0

Answer: A



Watch Video Solution

357. In the following question, a series is given with one or more number(s) missing. Choose the correct alternative from the given options.

22, 22, 23, 20, 16, 17, 17, ?, ?, 8

A. 18,9

B. 12,13

C. 10,9

D. 13,10

Answer: D



Watch Video Solution

358. A series is given with one term missing, choose the correct alternative from the given ones that will complete the series.

19, 28, 39, 52, ?, 84

A. 39

B. 52

C. 67

D. 84

Answer: C



Watch Video Solution

359. Find the missing term in the given series :

2 7 10 22 18 37 26 ?

A. 42

B. 52

C. 46

D. 62

Answer: B



Watch Video Solution

360. Find the missing term in the given series :

4 12 48 240 1440 ?

A. 7620

B. 10080

C. 6200

D. 10020

Answer: B



Watch Video Solution

361. Which number comes next in the series ?

1, 5, 2, 6, 3, 7, ?

A. 6

B. 5

C. 4

D. 3

Answer: C



Watch Video Solution

362. Find the missing number in the series

2, 3, 8, __, 112, 565

A. 565

B. 112

C. 27

D. 8

Answer: C



Watch Video Solution

363. A series is given, with one term missing. Choose the correct alternative from the given ones that will complete the series.

463, 452, 439, 424, ?

A. 407

B. 413

C. 419

D. 411

Answer: A



Watch Video Solution

364. The following question, a series is given, with one term missing. Choose the correct alternative from the given ones that will complete the series.

1, 3, 7, 13, 21, ?

A. 27

B. 29

C. 31

D. 33

Answer: C



Watch Video Solution

365. Find the missing number the following series :

43, 172, 86, 344, ?

A. 172

B. 258

C. 129

D. 430

Answer: A

[Watch Video Solution](#)

366. A-series is given, with one term missing. Choose the correct alternative from the given ones that will complete the series.

2, 7, 14, 23, 34, ?

A. 47

B. 39

C. 42

D. 46

Answer: A

[Watch Video Solution](#)

367. Find the missing number from the given alternatives

1, 4, 2, 3, 2, ?

A. 2

B. 5

C. 3

D. 4

Answer: C



Watch Video Solution

368. Find the missing number from the given alternatives

0 4 18 48 ? 180

A. 58

B. 68

C. 84

D. 100

Answer: D



Watch Video Solution

369. A series is given below with one term missing. Choose the correct alternative from the given ones that will complete the series.

124, 235, 346, 457, ?

A. 455

B. 465

C. 565

D. 568

Answer: D



Watch Video Solution

370. Which number will complete the series ?

63, 72, 81, 90, _____, 108

A. 80

B. 99

C. 100

D. 117

Answer: B



Watch Video Solution

371. A series is given, with one term missing. Choose the correct alternative from the given ones that will complete the series.

206, 309, 412, ?, 618, 721

A. 751

B. 749

C. 515

D. 514

Answer: C



Watch Video Solution

372. Find the missing number in the series :

219, 211, 204, 198, ?, 189

A. 189

B. 192

C. 193

D. 196

Answer: C



Watch Video Solution

373. Which one number when placed at the sign of interrogation shall complete the series

3, 6, 18, 72, ?, 2160

दिए गए विकल्पों में से कौन-सी संख्या प्रश्नवाचक चिन्ह पर रखने से श्रृंखला को पूरा करेगी-

3, 6, 18, 72, ?, 2160

A. 144

B. 216

C. 288

D. 360

Answer: D



Watch Video Solution

374. The following question, a series is given, with one term missing. Choose the correct alternative from the given ones that will complete the series.

100, 50, 52, 26, 28, ?, 16, 8

A. 14

B. 30

C. 32

D. 38

Answer: A



Watch Video Solution

375. Select the missing numbers from the given alternatives.

12 8 4 8 4 12 4 12 8 100 44 ?

A. 80

B. 56

C. 48

D. 36

Answer: B

[Watch Video Solution](#)

376. A series is given, with one term missing. Choose the correct alternative from the given ones that will complete the series.

10, 18, 28, 40, ?

A. 58

B. 46

C. 52

D. 54

Answer: D

[Watch Video Solution](#)

377. A series is given, with one term missing. Choose the correct alternative from the given ones that will complete the series.

5, 9, 6, 11, 7, ____

A. 13

B. 15

C. 17

D. 19

Answer: A



Watch Video Solution

378. A series is given, with one term missing. Choose the correct alternatives from the given ones that will complete the series :

6, 12, 36, 144, 720, 4320, ?

A. 30420

B. 30240

C. 31240

D. 32240

Answer: B



Watch Video Solution

379. A series is given, with one term missing. Choose the correct alternative from the given ones that will complete the series.

8, 15, 28, 53, ?

A. 106

B. 100

C. 108

D. 102

Answer: D



Watch Video Solution

380. A series is given, with one term missing. Choose the correct alternative from the given ones that will complete the series.

5, 9, 13, 17, ?, 25

A. 27

B. 23

C. 21

D. 19

Answer: C



Watch Video Solution



[Watch Video Solution](#)

381. Which number will complete the series?

14, 27, 52, 101, 198, ?

A. 381

B. 395

C. 391

D. 394

Answer: C



[Watch Video Solution](#)

382. The following question, a series is given, with one term missing. Choose the correct alternative from the given ones that

will complete the series.

6, 11, 21, 36, 56, _____

A. 42

B. 51

C. 81

D. 91

Answer: C



Watch Video Solution

383. Which number will complete the series?

1, 8, 27, 64, 125, 216, _____

A. 354

B. 343

C. 392

D. 245

Answer: B



Watch Video Solution

384. A series is given, with one term missing. Choose the correct alternative from the given ones that will complete the series.

5, 10, 30, ?, 600, 3600

A. 120

B. 100

C. 90

D. 60

Answer: A



Watch Video Solution

385. The following question, a series is given, with one term missing. Choose the correct alternative from the given ones that will complete the series.

5, 11, 17, 25, 33, 43, ?

A. 49

B. 51

C. 52

D. 53

Answer: D



Watch Video Solution

386. Which number will complete the series?

6, 8, 17, 19, 28, 30, ?

A. 32

B. 37

C. 38

D. 39

Answer: D



Watch Video Solution

387. A series is given, with one term missing. Choose the correct alternative from the given ones that will complete the series :

3 , 4, 7, ?, 18, 29, 47

A. 8

B. 9

C. 11

D. 12

Answer: C



Watch Video Solution

388. A series is given, with one term missing. Choose the correct alternative from the given ones that will complete the series.

41, 43, 47, 53, ?

A. 59

B. 63

C. 61

D. 65

Answer: C



Watch Video Solution

389. The missing number in the given series is :

15 (105) 14, 13 (?) 12

A. 91

B. 78

C. 65

D. 68

Answer: B



Watch Video Solution

390. The following question, a series is given, with one term missing. Choose the correct alternative from the given ones that will complete the series.

5, 11, 24, 51, 106, _____

A. 122

B. 217

C. 120

D. 153

Answer: B



Watch Video Solution

391. A series is given, with one term missing. Choose the correct alternative from the given ones that will complete the series,

9, 21, 45, 93, ?, 381

A. 189

B. 198

C. 188

D. 112

Answer: A



Watch Video Solution

392. A series is given, with one term missing. Choose the correct alternative from the given ones that will complete the series.

(3, 5), (5, 7), (?), (9, 11), (11, 13)

A. (7,9)

B. (7,11)

C. (9,11)

D. (9,13)

Answer: B



Watch Video Solution

393. A series is given, with one term missing. Choose the correct alternative from the given ones that will complete the series.

5, 10, 13, 26, 29, 58, 61, ?

A. 122

B. 125

C. 128

D. 125

Answer: A



Watch Video Solution

394. Which number will complete the series :

0, 1, 4, 15, ?, 325, 1956

A. 60

B. 64

C. 75

D. 80

Answer: B



Watch Video Solution

395. In each of the following questions, a series is given with one term missing. Choose the correct alternative from the given ones that will complete the series.

8, 24, 12, ?, 18, 54

A. 48

B. 36

C. 29

D. 21

Answer: B



Watch Video Solution

396. A series is given, with one term missing. Choose the correct alternative from the given ones that will complete the series :

68, 72, 65, 69, 62, 66, _____

A. 59

B. 61

C. 68

D. 75

Answer: A



Watch Video Solution

397. Choose the correct alternative that will replace the question mark in the given series

11, 13, 17, 19, 23, 25, ?

A. 25

B. 27

C. 29

D. 31

Answer: C



Watch Video Solution

398. A series is given, with one term missing. Choose the correct alternative from the given ones that will complete the series :

70, 62, 65, 57, ?, 52, 55

A. 67

B. 60

C. 47

D. 37

Answer: B



Watch Video Solution

399. The following question, a series is given, with one term missing. Choose the correct alternative from the given ones that will complete the series.

1, 6, 15, ?, 45, 66, 91

A. 26

B. 24

C. 28

D. 23

Answer: C



Watch Video Solution

400. A series is given with one term missing. Choose the correct alternative from the given ones that will complete the series.

30, 62, 189, 760, ?

A. 3306

B. 1157

C. 2185

D. 3805

Answer: D



Watch Video Solution

401. The following question, a series is given, with one term missing. Choose the correct alternative from the given ones that will complete the series.

4, 9, 19, 39, ____

A. 4

B. 9

C. 7

D. 6

Answer: A



Watch Video Solution

402. The following question, a series is given, with one term missing. Choose the correct alternative from the given ones that

will complete the series.

5, 11, 24, 51, 106, _____

A. 122

B. 217

C. 120

D. 153

Answer: B



Watch Video Solution

403. The following question, a series is given, with one term missing. Choose the correct alternative from the given ones that will complete the series.

6, 12, 20, 30, ?

A. 53

B. 52

C. 56

D. 50

Answer: C



Watch Video Solution

404. A series is given with one term missing. Choose the correct alternative from the given ones that will complete the series.

10, 29, 66, 127, ? 345

A. 330

B. 115

C. 218

D. 273

Answer: C



Watch Video Solution

405. A series is given with one term missing. Choose the correct alternative from the given ones that will complete the series.

7, 14, 28, 56, ?

A. 84

B. 112

C. 124

D. 92

Answer: B



Watch Video Solution

[Watch Video Solution](#)

406. A series is given with one term missing. Choose the correct alternative from the given ones that will complete the series.

96, 90, 78, 60, ?

A. 36

B. 40

C. 44

D. 48

Answer: A

[Watch Video Solution](#)

407. A series is given with one term missing. Choose the correct alternative from the given ones that will complete the series.

?, 9, 19, 39, 79

A. 4

B. 9

C. 4

D. 6

Answer: A



Watch Video Solution

408. A series is given with one term missing. Choose the correct alternative from the given ones that will complete the series :

5, 30, 155, 780, ?

A. 4000

B. 3905

C. 3900

D. 3805

Answer: B



Watch Video Solution

409. A series is given with one term missing. Choose the correct alternative from the given ones that will complete the series.

8, 27, 125, 343, ?

A. 1000

B. 729

C. 1331

D. 1728

Answer: C



Watch Video Solution

410. A series is given with one term missing. Choose the correct alternative from the given ones that will complete the series.

3, 6, 11, 20, ?

A. 42

B. 41

C. 37

D. 47

Answer: C



Watch Video Solution

[Watch Video Solution](#)

411. A series is given with one term missing. Choose the correct alternative from the given ones that will complete the series.

0, 4, 18, 48, 100, 180, ?

A. 294

B. 211

C. 186

D. 222

Answer: A

[Watch Video Solution](#)

412. A series is given with one term missing. Select the correct alternative from the given ones that will complete the series.

76, 101, 151, 226, ?

A. 351

B. 426

C. 326

D. 301

Answer: C



Watch Video Solution

413. A series is given with one term missing. Select the correct alternative from the given ones that will complete the series.

2, 3, 5, 9, 17, ?

A. 31

B. 32

C. 33

D. 34

Answer: C



Watch Video Solution

414. A series is given with one term missing. Choose the correct alternative from the given ones that will complete the series.

1, 7, 42, 210, 840, ?

A. 1240

B. 2640

C. 1680

D. 2520

Answer: A



Watch Video Solution

415. A series is given with one term missing. Out of the four alternatives, choose the alternative that will complete the series :

2, 5, 10, 17, 26, _____

A. 38

B. 33

C. 37

D. 35

Answer: D



Watch Video Solution

416. In the following question, select the missing number from the given series.

5,7,11,17,25, _____

A. 32

B. 33

C. 35

D. 34

Answer: C



Watch Video Solution

417. In the following question, select the missing number from the given series.

3, 10, 31, 94, ?

A. 197

B. 127

C. 283

D. 317

Answer: B



Watch Video Solution

418. In the following question, select the missing number from the given series.

3, 4, 12, 48, 576, ?

A. 27648

B. 13824

C. 23040

D. 28166

Answer: C



Watch Video Solution

419. In the following question, select in the missing number from the given alternatives

3, 10, 24, 52, 108, ?

A. 180

B. 190

C. 210

D. 220

Answer: D



Watch Video Solution

420. In the following question, select the missing number from the given alternatives

1, 4, 15, 64, ?

A. 285

B. 315

C. 325

D. 375

Answer: D



Watch Video Solution

[Watch Video Solution](#)

421. In the following question, select the missing number from the given series.

1, 1, 3, 4, 5, 9, 7, 16, 9, 25, 11, ?

A. 17

B. 36

C. 49

D. 37

Answer: A

[Watch Video Solution](#)

422. In the following question, select the missing number from the given series.

?, 5, 15, 45, 113

A. 1

B. 2

C. 3

D. 4

Answer: D



Watch Video Solution

423. In the following question, select the missing number from the given series.

1, 8, 29, 92, 281, ?

A. 567

B. 628

C. 776

D. 848

Answer: C



Watch Video Solution

424. In the following question, select the missing number from the given series :

2, 7, 22, 67, ?

A. 197

B. 198

C. 200

D. 202

Answer: D



Watch Video Solution

425. In the following question, select the missing number from the given series.

283, 94, 31, 10, ?

A. 3

B. 4

C. 5

D. 7

Answer: A



Watch Video Solution

[Watch Video Solution](#)

426. In the following question, select the missing number from the given series.

2, 3, 7, 22, 155, ?

A. 1701

B. 1711

C. 3410

D. 3411

Answer: D

[Watch Video Solution](#)

427. In the following question, select the missing number from the given series :

21, 26, 33, 42, 53, ?

A. 56

B. 63

C. 63

D. 69

Answer: C



Watch Video Solution

428. In the following question, select the missing number from the given series.

2, 4, 13, 41, 106, ?

A. 172

B. 191

C. 219

D. 232

Answer: D



Watch Video Solution

429. In the following question, select the missing number from the given alternatives:

19, 38?, 228, 684, 1368

A. 108

B. 113

C. 114

D. 138

Answer: C



Watch Video Solution

430. In the following question, select the missing number from the given alternatives :

1357, 3085, 5282, 8026, ?

A. 9961

B. 10441

C. 11321

D. 11401

Answer: D



Watch Video Solution

[Watch Video Solution](#)

431. In the following question, select the missing number from the given series :

7, 19, 42, 87 , ?

A. 136

B. 176

C. 172

D. 216

Answer: B

[Watch Video Solution](#)

432. In the following question , select the missing number from the given alternatives :

21, 25, 52, 68, 193, ?

A. 229

B. 242

C. 257

D. 409

Answer: A



Watch Video Solution

433. In the following question, select the missing number from the given series :

3, 8, 5, 27, 8, 64, 12, 125, 17, ?

A. 216

B. 361

C. 625

D. 441

Answer: A



Watch Video Solution

434. In the following question, select the missing number from the given series :

5, 13, 40, 104 , ?

A. 229

B. 239

C. 259

D. 269

Answer: A



Watch Video Solution

435. In the following question, select the missing number from the given series :

1, 3, 6, 11, 18, ?

A. 27

B. 28

C. 29

D. 31

Answer: C



Watch Video Solution

[Watch Video Solution](#)

436. In the following question, select the missing number from the given series :

3, 7, 16, 35, ?

A. 73

B. 74

C. 78

D. 82

Answer: B

[Watch Video Solution](#)

437. A series is given, with one number missing. Choose the correct alternative from the given ones that will complete the series.

$$\frac{3}{5}, 1.4, \frac{11}{5}, ?, \frac{19}{5}, 4.6$$

A. $\frac{14}{5}$

B. 3.2

C. $\frac{16}{5}$

D. 3

Answer: D



Watch Video Solution

438. A series is given, with one number missing. Choose the correct alternative from the given ones that will complete the

series.

$$-\frac{7}{4}, -1, -0.25, ?, \frac{5}{4}, 2$$

A. 0.5

B. 0.75

C. 0.25

D. 1

Answer: A



Watch Video Solution

439. A series is given, with one number missing. Choose the correct alternative from the given ones that will complete the series :

6, 18, 54, ?, 486, 1458

A. 164

B. 160

C. 168

D. 162

Answer: D



Watch Video Solution

440. A series is given, with one number missing. Choose the correct alternative from the given ones that will complete the series.

111, 107.5, 104, ? , 97, 93.5

A. 100

B. 99.5

C. 100.5

D. 99

Answer: C



Watch Video Solution

441. A series is given, with one number missing. Choose the correct alternative from the given ones that will complete the series.

$-0.5, -0.35, -0.2, -0.05, ?, 0.25$

A. -0.1

B. 0.1

C. 0.15

D. -0.15

Answer: B



Watch Video Solution

442. In the following question, select the missing number from the given alternatives :

33, 10, 43, 53, 96, ?

A. 150

B. 163

C. 171

D. 149

Answer: D



Watch Video Solution

443. In the following question, select - the missing number from the given alternatives :

13, 24, 37, 61, 98, ?

A. 159

B. 163

C. 134

D. 172

Answer: A



Watch Video Solution

444. In the following question, select the missing number from the given alternatives :

9, 19, 37, 75, 149, ?

A. 297

B. 298

C. 300

D. 299

Answer: D



Watch Video Solution

445. In the following question, select the missing number from the given alternatives :

23, 11, 34, 45, 79, ?

A. 121

B. 124

C. 163

D. 169

Answer: B



Watch Video Solution

446. In the following question, select the missing number from the given alternatives :

43, 45, 42, 46, 41, 47, ?

A. 41

B. 40

C. 38

D. 42

Answer: B



Watch Video Solution

[Watch Video Solution](#)

447. select the missing number from the given alternatives :

1, 25, ?, 361, 841, 1681

A. 169

B. 225

C. 161

D. 121

Answer: D

[Watch Video Solution](#)

448. In the following question, select the missing number from the given alternatives :

4, 13, 41, 126, 382, ?

A. 1149

B. 1146

C. 1151

D. 1167

Answer: C



Watch Video Solution

449. In the following question, select the missing number from the given alternatives :

16, 17, 25, 52, 116, ?

A. 225

B. 219

C. 241

D. 263

Answer: C



Watch Video Solution

450. In the following question, select the missing number from the given series :

3, 7, 16, 35, ?

A. 65

B. 72

C. 74

D. 76

Answer: C



Watch Video Solution

451. In the following question, select the missing number from the given series :

1, 4, 3, 16, 6, 36, 10, 64, 15, 100, ?

A. 21

B. 19

C. 22

D. 25

Answer: A



Watch Video Solution

452. In the following question, select the missing number from the given series :

11, 8, 4, - 1, ?

A. - 5

B. 5

C. - 6

D. - 7

Answer: D



Watch Video Solution

453. In the following question, select the missing number from the given series :

33, 40, 48, 57, 67, ?

A. 80

B. 76

C. 78

D. 81

Answer: C



Watch Video Solution

454. In the following question, select the missing number from the given series (need to write options).

104, 52, 26, 13, 6.5, ?

A. 3.5

B. 3.75

C. 4.25

D. 3.25

Answer: D



Watch Video Solution

455. In the following question, select the missing number from the given alternatives.

120, 119, 115, 106, 90 ?

A. 75

B. 65

C. 77

D. 62

Answer: B



Watch Video Solution

[Watch Video Solution](#)

456. In the following question, select the missing number from the given alternatives :

76, 73, 71, 67, 64, 62, ?

A. 60

B. 57

C. 58

D. 59

Answer: C

[Watch Video Solution](#)

457. In the following question, select the missing number from the given series.

84, 42, 28, 21, ?

A. 10.5

B. 16.8

C. 18.4

D. 19.6

Answer: B



Watch Video Solution

458. In the following question, select the missing number from the given series.

2.2, 14.8, 40, 90.4, ?

A. 191.2

B. 194.4

C. 196.2

D. 208.4

Answer: A



Watch Video Solution

459. In the following question, select the missing number from the given alternatives :

3, 7, 13, 27, 53, ?

A. 107

B. 111

C. 109

D. 105

Answer: A



Watch Video Solution

460. In the following question, select the missing number from the given series.

35, 50, 63 , 82 , ? , 122

A. 101

B. 99

C. 100

D. None of these

Answer: B



Watch Video Solution

[Watch Video Solution](#)

461. In the following question, select the missing number from the given alternatives

14, 22, 37, 61, 96, ?

A. 152

B. 132

C. 144

D. 162

Answer: C

[Watch Video Solution](#)

462. In the following question, select the missing number from the given alternatives

263, 277, 290, 302, 313, ?

A. 323

B. 329

C. 321

D. 331

Answer: A



Watch Video Solution

463. In the following question, select the missing number from the given alternatives

4, 16, 36, 64, ?

A. 81

B. 121

C. 100

D. 331

Answer: C



Watch Video Solution

464. In the following question, select the missing number from the given alternatives

14, 29, 60 , 123 , ?

A. 210

B. 250

C. 196

D. 158

Answer: B



Watch Video Solution

465. In the following question, select the missing number from the given series.

19, 9, 28, 37, 65, ?

A. 99

B. 97

C. 102

D. 113

Answer: C



Watch Video Solution

[Watch Video Solution](#)

466. In the following question, select the missing number from the given series.

49, 46, 43, 40, ?, 34

A. 38

B. 37

C. 36

D. 39

Answer: B

[Watch Video Solution](#)

467. In the following question, select the missing number from the given series.

23, 28, 34, 41, 49, ?

A. 59

B. 57

C. 58

D. 55

Answer: C



Watch Video Solution

468. In the following question, select the missing number from the given series.

672, 666, 660, 654, ?

A. 648

B. 646

C. 650

D. 640

Answer: A



Watch Video Solution

TYPE - II

1. In the following questions, a series is given, with one term missing. Choose the correct alternative from the given ones that will complete the series.

ABC FGH LMN _ _ _

A. IJK

B. OPQ

C. STU

D. RST

Answer: C



Watch Video Solution

2. In the following questions, a series is given, with one term missing. Choose the correct alternative from the given ones that will complete the series.

DHL, PTX, BFJ, ?

A. NRV

B. RVZ

C. CGK

D. KOS

Answer: A



Watch Video Solution

3. In the following questions, a series is given, with one term missing. Choose the correct alternative from the given ones that will complete the series.

CAT, FDW, IGZ, ?

A. KTC

B. KJA

C. LHD

D. LJC

Answer: D



Watch Video Solution

4. In the following questions, a series is given, with one term missing. Choose the correct alternative from the given ones that will complete the series.

WYV, ?, IKH, BDA

A. OPRE

B. ROP

C. PRO

D. OQN

Answer: C



Watch Video Solution

5. In the following questions, a series is given, with one term missing. Choose the correct alternative from the given ones that will complete the series.

a, c, f, j, ?, ?

A. ou

B. mo

C. lp

D. rv

Answer: A



Watch Video Solution

6. In the following questions, a series is given, with one term missing. Choose the correct alternative from the given ones that will complete the series.

QYK, ?, ISG, EPE

A. NWJ

B. MVI

C. NVIT

D. MVJ

Answer: B



Watch Video Solution

7. In the following questions, a series is given, with one term missing. Choose the correct alternative from the given ones that

will complete the series.

DIB, HMF, LQJ, ?

A. OTM

B. QVO

C. PVO

D. PUN

Answer: D



Watch Video Solution

8. In the following questions, a series is given, with one term missing. Choose the correct alternative from the given ones that will complete the series.

NOA, PQB, RSC, ?

A. TUD

B. DTU

C. ENO

D. FNQ

Answer: A



Watch Video Solution

9. In the following questions, a series is given, with one term missing. Choose the correct alternative from the given ones that will complete the series.

T, R, P, N, L, ?, ?

A. J, G

B. K, I

C. J, H

D. K, H

Answer: C



Watch Video Solution

10. In the following questions, a series is given, with one term missing. Choose the correct alternative from the given ones that will complete the series.

ADG, GJM, MPS, ?

A. SVW

B. SVY

C. SUWS

D. SWY

Answer: B



Watch Video Solution

11. In the following questions, a series is given, with one term missing. Choose the correct alternative from the given ones that will complete the series.

A, D, H, M, ?, Z.

A. B

B. G

C. S

D. N

Answer: C



Watch Video Solution

12. In the following questions, a series is given, with one term missing. Choose the correct alternative from the given ones that will complete the series.

BMO, EOQ, HQS, _?

A. SOW

B. LMN

C. KSU

D. SOV

Answer: C



Watch Video Solution

13. In the following questions, a series is given, with one term missing. Choose the correct alternative from the given ones that will complete the series.

CGK, EJP, GMU, ?

A. IRT

B. IPZ

C. FNV

D. JLN

Answer: B



Watch Video Solution

14. In the following questions, a series is given, with one term missing. Choose the correct alternative from the given ones that

will complete the series.

NOABOPBCPQCD ? ? ? ?

A. QRDE

B. RTEF

C. QSDE

D. QRGH

Answer: A



Watch Video Solution

15. In the following questions, a series is given, with one term missing. Choose the correct alternative from the given ones that will complete the series.

KDW, MGT, OJQ. ?

A. MNQ

B. QNM

C. NMQ

D. QMN

Answer: D



Watch Video Solution

16. In the following questions, a series is given, with one term missing. Choose the correct alternative from the given ones that will complete the series.

ADH, DGK, GJN, ?

A. ORV

B. JMP

C. JLM

D. JMQ

Answer: D



Watch Video Solution

17. In the following questions, a series is given, with one term missing. Choose the correct alternative from the given ones that will complete the series.

AGM, BHN, CIO, ?

A. COU

B. FOK

C. DJP

D. QXD

Answer: C



Watch Video Solution

18. In the following questions, a series is given, with one term missing. Choose the correct alternative from the given ones that will complete the series.

DFI, KMP, ? , YAD

A. OSV

B. RTW

C. SUX

D. RTV

Answer: B



Watch Video Solution

19. In the following questions, a series is given, with one term missing. Choose the correct alternative from the given ones that will complete the series.

WVTSOPNMKJ ? ?

A. HG

B. IL

C. GH

D. GF

Answer: A



Watch Video Solution

20. In the following questions, a series is given, with one term missing. Choose the correct alternative from the given ones that will complete the series.

ZCBA, YFED, XIHG, ?

A. WLKM

B. WJKL

C. WKLJ

D. WLKJ

Answer: D



Watch Video Solution

21. In the following questions, a series is given, with one term missing. Choose the correct alternative from the given ones that

will complete the series.

DWEV, FUGT, HSIR, ?

A. JKQP

B. JPQK

C. JQKP

D. JPKQ

Answer: C



Watch Video Solution

22. In the following questions, a series is given, with one term missing. Choose the correct alternative from the given ones that will complete the series.

FNC, HQG, JTK, ?

A. LXO

B. LMO

C. KMT

D. LWO

Answer: D



Watch Video Solution

23. In the following questions, a series is given, with one term missing. Choose the correct alternative from the given ones that will complete the series.

AMV, FQX, KUZ, ?

A. PYB

B. OXA

C. NYB

D. MYB

Answer: A



Watch Video Solution

24. In the following questions, a series is given, with one term missing. Choose the correct alternative from the given ones that will complete the series.

Find the next two letters in the given series.

B C E H L ? ?

A. XY

B. MN

C. QW

D. OP

Answer: C



Watch Video Solution

25. In the following questions, a series is given, with one term missing. Choose the correct alternative from the given ones that will complete the series.

AGMSY, CIOUA, EKQWC, ____, IOUAG, KQWCI

A. GMSYE

B. FMSYE

C. GNSYD

D. FMYES

Answer: A



Watch Video Solution

26. In the following questions, a series is given, with one term missing. Choose the correct alternative from the given ones that will complete the series.

a, r, c, s, e, t, g, __, __

A. x, z

B. u, i

C. w, y

D. v, b

Answer: B



Watch Video Solution

27. In the following questions, a series is given, with one term missing. Choose the correct alternative from the given ones that will complete the series.

(?), PSVYB, EHKNQ, TWZCF, ILORU

A. BEHKN

B. ADGJM

C. SVYBE

D. ZCFIL

Answer: B



Watch Video Solution

28. In the following questions, a series is given, with one term missing. Choose the correct alternative from the given ones that will complete the series.

CFI, IKM, OPQ, _?

A. UUU

B. UST

C. VUS

D. TUV

Answer: A



Watch Video Solution

29. In the following questions, a series is given, with one term missing. Choose the correct alternative from the given ones that

will complete the series.

Series : $\frac{AB}{C}, \frac{ZY}{X}, \frac{DE}{F}, \frac{WV}{U}, \frac{GH}{I}, \text{-----}$

A. $\frac{SR}{Q}$

B. $\frac{TS}{R}$

C. $\frac{ST}{R}$

D. $\frac{RS}{Q}$

Answer: B



Watch Video Solution

30. In the following questions, a series is given, with one term missing. Choose the correct alternative from the given ones that will complete the series.

$\frac{W}{S}, \frac{U}{O}, \frac{S}{K}, \frac{Q}{G}, ?$

A. P/R

B. C/O

C. R/J

D. O/C

Answer: D



Watch Video Solution

31. In the following questions, a series is given, with one term missing. Choose the correct alternative from the given ones that will complete the series.

HIIJ, IJJK, JK KL, KLLM, LMMN, _____

A. LNNO

B. MN NP

C. NOOP

D. MNNO

Answer: D



Watch Video Solution

32. In the following questions, a series is given, with one term missing. Choose the correct alternative from the given ones that will complete the series.

BDFH, IKMO, PRTV, ?

A. WYAC

B. WXYA

C. WXYZ

D. WYXA

Answer: A



Watch Video Solution

33. In the following questions, a series is given, with one term missing. Choose the correct alternative from the given ones that will complete the series.

____,DREQ,GUHT,JXKW

A. EFRS

B. TGSF

C. JWVI

D. AOBN

Answer: D



Watch Video Solution

34. In the following questions, a series is given, with one term missing. Choose the correct alternative from the given ones that will complete the series.

WTPMIFB ____, ____

A. ZV

B. XU

C. YU

D. YV

Answer: C



Watch Video Solution

35. In the following questions, a series is given, with one term missing. Choose the correct alternative from the given ones that will complete the series.

BMRG, DLTF, FKVE, HJXD, _____.

A. JIZC

B. JZIB

C. GIFB

D. MOLC

Answer: A



Watch Video Solution

36. In the following questions, a series is given, with one term missing. Choose the correct alternative from the given ones that

will complete the series.

XYZ CBA UVW FE ____, ____

A. DR

B. RS

C. DS

D. MN

Answer: A



Watch Video Solution

37. In the following questions, a series is given, with one term missing. Choose the correct alternative from the given ones that will complete the series.

MNO ABC PQR DEF ST ? ?

A. GK

B. UV

C. GH

D. UG

Answer: D



Watch Video Solution

38. In the following questions, a series is given, with one term missing. Choose the correct alternative from the given ones that will complete the series.

WORLD, XPSME, ?, ZRUOG

A. YQTNF

B. YRTNF

C. YTQNF

D. YQNTF

Answer: A



Watch Video Solution

39. In the following questions, a series is given, with one term missing. Choose the correct alternative from the given ones that will complete the series.

DEF, HIJ, MNO, ?

A. IKJ

B. STU

C. OPQ

D. XYZ

Answer: B



Watch Video Solution

40. In the following questions, a series is given, with one term missing. Choose the correct alternative from the given ones that will complete the series.

WV, PO, IH, BA, ?

A. ST

B. RS

C. UT

D. UV

Answer: C



Watch Video Solution

41. In the following questions, a series is given, with one term missing. Choose the correct alternative from the given ones that will complete the series.

b, c, f, g, j, k, ?

A. p

B. o

C. n

D. m

Answer: C



Watch Video Solution

42. In the following questions, a series is given, with one term missing. Choose the correct alternative from the given ones that will complete the series.

ZTW, YSV, XRU, ?

A. WTQ

B. QTW

C. WQT

D. WQS

Answer: C



Watch Video Solution

43. A series is given, with one term missing. Choose the correct alternative from the given ones that will complete the series.

DF, GJ, KM, NQ, RT, ?

A. EI

B. UX

C. UV

D. XY

Answer: B



Watch Video Solution

44. In the following questions, a series is given, with one term missing. Choose the correct alternative from the given ones that will complete the series.

G, I, L, P, ?

A. E

B. U

C. O

D. X

Answer: B



Watch Video Solution

45. In the following questions, a series is given, with one term missing. Choose the correct alternative from the given ones that will complete the series.

A E I M ? U

A. Q

B. P

C. N

D. O

Answer: A



Watch Video Solution

46. In the following questions, a series is given, with one term missing. Choose the correct alternative from the given ones that will complete the series.

V, T, ?, P, N

A. S

B. Q

C. O

D. R

Answer: D



Watch Video Solution

47. In the following questions, a series is given, with one term missing. Choose the correct alternative from the given ones that will complete the series.

?, HJL, NPR, TVX, ZBD

A. BDF

B. BFD

C. BED

D. CFI

Answer: A



Watch Video Solution

48. In the following questions, a series is given, with one term missing. Choose the correct alternative from the given ones that will complete the series.

aAbb, bBcc, cCdd, dDee, eEff, ?

A. fFhh

B. fFgg

C. gHii

D. fHii

Answer: B



Watch Video Solution

49. In the following questions, a series is given, with one term missing. Choose the correct alternative from the given ones that will complete the series.

B, E, I, L, P, ?

A. T

B. U

C. S

D. R

Answer: C



Watch Video Solution

50. In the following questions, a series is given, with one term missing. Choose the correct alternative from the given ones that

will complete the series.

AB, DEF, HIJK, ?, STUVWX

A. LMNOP

B. LMNOR

C. MNOPQ

D. QRSTU

Answer: C



Watch Video Solution

51. In the following questions, a series is given, with one term missing. Choose the correct alternative from the given ones that will complete the series.

OTE, PUF, QVG, RWH, ?

A. SXI

B. SYJE

C. TXJ

D. SXJ

Answer: A



Watch Video Solution

52. In the following questions, a series is given, with one term missing. Choose the correct alternative from the given ones that will complete the series.

QRE, RSD, STC, ?

A. YZB

B. BNE

C. TUB

D. TUA

Answer: D



Watch Video Solution

53. In the following questions, a series is given, with one term missing. Choose the correct alternative from the given ones that will complete the series.

D, F, I, M, ? , X

A. A

B. H

C. R

D. U

Answer: C



Watch Video Solution

54. In the following questions, a series is given, with one term missing. Choose the correct alternative from the given ones that will complete the series.

AOP, CQR, EST, GUV, ?

A. IYZ

B. HWX

C. IWX

D. JWX

Answer: C



Watch Video Solution

55. In the following questions, a series is given, with one term missing. Choose the correct alternative from the given ones that will complete the series.

D, H, L, R, ?

A. T

B. X

C. I

D. O

Answer: B



Watch Video Solution

56. In the following questions, a series is given, with one term missing. Choose the correct alternative from the given ones that will complete the series.

BFH, ZDF, JNP, T, ?

A. WX

B. XY

C. ZA

D. XZ

Answer: D



Watch Video Solution

57. In the following questions, a series is given, with one term missing. Choose the correct alternative from the given ones that

will complete the series.

Z, W, T, ?, N, K

A. R

B. P

C. Q

D. S

Answer: C



Watch Video Solution

58. In the following questions, a series is given, with one term missing. Choose the correct alternative from the given ones that will complete the series.

B, E, I, N, ?

A. O

B. S

C. T

D. U

Answer: C



Watch Video Solution

59. In the following questions, a series is given, with one term missing. Choose the correct alternative from the given ones that will complete the series.

CDE, IJK, NOP, ?

A. FGH

B. RST

C. TUV

D. QRS

Answer: B



Watch Video Solution

60. In the following questions, a series is given, with one term missing. Choose the correct alternative from the given ones that will complete the series.

YXW, UTS, QPO, ML ____, __ HG

A. LM

B. JI

C. KI

D. IH

Answer: C



Watch Video Solution

61. In the following questions, a series is given, with one term missing. Choose the correct alternative from the given ones that will complete the series.

CEG, IKM, OQS, ?

A. TVX

B. UWY

C. UWZ

D. TVW

Answer: B



Watch Video Solution

62. A series is given with one term missing. Select the correct alternative from the given ones that will complete the series.

A, B, D, G, ?

A. I

B. J

C. K

D. L

Answer: C



Watch Video Solution

63. Choose the correct alternative from the given ones that will complete the series.

a d c f ? h g ? i

A. j e

B. f j

C. e k

D. e j

Answer: D



Watch Video Solution

64. In the following questions, a series is given, with one term missing. Choose the correct alternative from the given ones that will complete the series.

BDF, JLN, PRT, ?

A. WXY

B. VXY

C. UWY

D. VWX

Answer: C



Watch Video Solution

65. Choose the correct alternative from the given ones that will complete the series.

Z, T, O, K, H, ?

A. G

B. F

C. E

D. C

Answer: B



Watch Video Solution

66. Choose the correct alternative from the given ones that will complete the series.

I, W, K, U, M, S, O, Q, ?

A. P

B. L

C. Q

D. M

Answer: D



Watch Video Solution

67. Choose the correct alternative from the given ones that will complete the series.

Q, N, K, H, E, ?

A. R

B. B

C. C

D. A

Answer: B



Watch Video Solution

68. Choose the correct alternative from the given ones that will complete the series.

C, A, F, D, I, ?, L

A. G

B. H

C. J

D. K

Answer: A



Watch Video Solution

69. In the following questions, a series is given, with one term missing. Choose the correct alternative from the given ones that will complete the series.

B, D, F, I, L, P, ?

A. U

B. R

C. S

D. T

Answer: D



Watch Video Solution

70. In the following questions, a series is given, with one term missing. Choose the correct alternative from the given ones that will complete the series.

C, E, I, K, O, Q, ?

A. R

B. S

C. T

D. U

Answer: D



Watch Video Solution

71. In the following questions, a series is given, with one term missing. Choose the correct alternative from the given ones that will complete the series.

A C B E C G D ? ?

A. HE

B. EI

C. IE

D. FE

Answer: C



Watch Video Solution

72. In the following questions, a series is given, with one term missing. Choose the correct alternative from the given ones that will complete the series.

B, F, J, N, R, V, Z, D, H, L, ?

A. M

B. O

C. P

D. T

Answer: C



Watch Video Solution

73. In the following questions, a series is given, with one term missing. Choose the correct alternative from the given ones that will complete the series.

F, L, Q, U, X, ?

A. B

B. Z

C. Y

D. A

Answer: B



Watch Video Solution

74. In the following questions, a series is given, with one term missing. Choose the correct alternative from the given ones that

will complete the series.

A, Z, C, X, E, ?

A. U

B. W

C. V

D. Y

Answer: C



Watch Video Solution

75. In the following questions, a series is given, with one term missing. Choose the correct alternative from the given ones that will complete the series.

AB, DC, EF, HG, IJ, LK. ?

A. LM

B. NM

C. MN

D. ML

Answer: C



Watch Video Solution

76. In the following questions, a series is given, with one term missing. Choose the correct alternative from the given ones that will complete the series.

CGK, FJN, IMQ, ?

A. SPL

B. NIH

C. LPT

D. QLP

Answer: C



Watch Video Solution

77. In the following questions, a series is given, with one term missing. Choose the correct alternative from the given ones that will complete the series.

PBA, QDC, RFE, ?

A. SHG

B. OAB

C. TJI

D. ULK

Answer: A



Watch Video Solution

78. In the following questions, a series is given, with one term missing. Choose the correct alternative from the given ones that will complete the series.

Z, X, ?, N, F

A. T

B. R

C. Q

D. O

Answer: A



Watch Video Solution

79. In the following questions, a series is given, with one term missing. Choose the correct alternative from the given ones that will complete the series.

AYBZC, DWEXF, GUHVI, JSKTL, (?)

A. MQORN

B. QMONR

C. MQNRO

D. NQMOR

Answer: C



Watch Video Solution

80. In the following questions, a series is given, with one term missing. Choose the correct alternative from the given ones that will complete the series.

AND, EAR, INK, OLD ?

A. URN

B. AGE

C. DOG

D. OIL

Answer: A



Watch Video Solution

81. In the following questions, a series is given, with one term missing. Choose the correct alternative from the given ones that

will complete the series.

BAT, EAT, HAT, ?

A. CAT

B. FATE

C. RAT

D. KAT

Answer: D



Watch Video Solution

82. In the following questions, a series is given, with one term missing. Choose the correct alternative from the given ones that will complete the series.

AC, FH, ? M

A. I

B. J

C. K

D. L

Answer: C



Watch Video Solution

83. Choose the correct alternative from the given ones that will complete the series.

Y V S P M ____.

A. J

B. K

C. L

D. I

Answer: A



Watch Video Solution

84. . Choose the correct alternative from the given ones that will complete the series.

XYZ, ABC, UVW, DEF, RST, GHI, _____.

A. UVW

B. JKL

C. OPQ

D. NOP

Answer: C



Watch Video Solution



[Watch Video Solution](#)

85. Choose the correct alternative from the given ones that will complete the series.

DGJ, FIL, HKN, JMP, ?

A. LON

B. LOR

C. LOQ

D. LOM

Answer: B



[Watch Video Solution](#)

86. In the following questions, a series is given, with one term missing. Choose the correct alternative from the given ones that will complete the series.

AE, FJ, ____ , PT

A. MN

B. UV

C. KO

D. YZ

Answer: C



Watch Video Solution

87. In the following questions, a series is given, with one term missing. Choose the correct alternative from the given ones that

will complete the series.

BDF, HJL, NPR, ____.

A. TRP

B. TVY

C. TVX

D. UWX

Answer: C



Watch Video Solution

88. A series is given with one term missing. Choose the correct alternative from the given ones that will complete the series

N O A B O P B C P Q C D ? ? ? ?

A. QRDE

B. RTEF

C. QSDE

D. QRGJ

Answer: A



Watch Video Solution

89. A series is given with one term missing. Choose the correct alternative from the given ones that will complete the series

H J M Q ?

A. A

B. W

C. S

D. V

Answer: D



Watch Video Solution

90. In the following questions, a series is given, with one term missing. Choose the correct alternative from the given ones that will complete the series.

BDF, KMO, TVX, ____.

A. CEG

B. UVW

C. XYZ

D. ACE

Answer: A



Watch Video Solution

91. In the following questions, a series is given, with one term missing. Choose the correct alternative from the given ones that will complete the series.

Z X U Q L ____.

A. F

B. E

C. G

D. H

Answer: A



Watch Video Solution

92. In the following questions, a series is given, with one term missing. Choose the correct alternative from the given ones that will complete the series.

ZXV, TRP, NLJ , ____.

A. IGF

B. HDF

C. HGE

D. HFD

Answer: D



Watch Video Solution

93. In the following questions, a series is given, with one term missing. Choose the correct alternative from the given ones that

will complete the series.

BDF,____, PRT, WYA

A. GJK

B. HKL

C. IKM

D. IJK

Answer: C



Watch Video Solution

94. In the following questions, a series is given, with one term missing. Choose the correct alternative from the given ones that will complete the series.

A C F J O ____ B

A. I

B. H

C. U

D. D

Answer: C



Watch Video Solution

95. In the following questions, a series is given, with one term missing. Choose the correct alternative from the given ones that will complete the series.

X U R O L I ? ?

A. HG

B. HE

C. FC

D. GE

Answer: C



Watch Video Solution

96. In the following questions, a series is given, with one term missing. Choose the correct alternative from the given ones that will complete the series.

ABCDE, BDAEC, DEBCA,?

A. EACDB

B. ECADB

C. EDCAB

D. ECDAB

Answer: D



Watch Video Solution

97. In the following questions, a series is given, with one term missing. Choose the correct alternative from the given ones that will complete the series.

ASY, BRX, CQW, ____.

A. DVP

B. DPV

C. PDV

D. POD

Answer: B



Watch Video Solution

98. In the following questions, a series is given, with one term missing. Choose the correct alternative from the given ones that will complete the series.

Y, S, N, J, G, ____.

A. F

B. E

C. H

D. I

Answer: B



Watch Video Solution

99. In the following questions, a series is given, with one term missing. Choose the correct alternative from the given ones that will complete the series.

D, F, I, M, ?

A. P

B. Q

C. R

D. T

Answer: C



Watch Video Solution

100. In the following questions, a series is given, with one term missing. Choose the correct alternative from the given ones that

will complete the series.

AEI, BFJ, CGK, ?

A. DHL

B. EIM

C. DLH

D. LPT

Answer: A



Watch Video Solution

101. In the following questions, a series is given, with one term missing. Choose the correct alternative from the given ones that will complete the series.

KiD, NkH, QmL, ToP, ?

A. WqT

B. UqS

C. WvS

D. VrT

Answer: A



Watch Video Solution

102. In the following questions, a series is given, with one term missing. Choose the correct alternative from the given ones that will complete the series.

A Z B Y C ___, ____.

A. XD

B. WE

C. DX

D. EW

Answer: A



Watch Video Solution

103. In the following questions, a series is given, with one term missing. Choose the correct alternative from the given ones that will complete the series.

YXW, UTS, QPO, MLK, ?

A. LMN

B. JIH

C. KJIS

D. IHG

Answer: D



Watch Video Solution

104. In the following questions, a series is given, with one term missing. Choose the correct alternative from the given ones that will complete the series.

AD, EH, IL, ____, QT .

A. LM

B. MN

C. MP

D. OM

Answer: C



Watch Video Solution

105. In the following questions, a series is given, with one term missing. Choose the correct alternative from the given ones that will complete the series.

ABCD, IJKL, QRST, ____.

A. YZAB

B. ABYZ

C. BAZY

D. YAZB

Answer: A



Watch Video Solution

106. In the following questions, a series is given, with one term missing. Choose the correct alternative from the given ones that will complete the series.

BE, HK, NQ, ?

A. PR

B. SU

C. TW

D. UW

Answer: C



Watch Video Solution

107. In the following questions, a series is given, with one term missing. Choose the correct alternative from the given ones that

will complete the series.

AZBY, CXDW, EVFU, ?

A. ITGS

B. GSIT

C. GISI

D. GTHS

Answer: D



Watch Video Solution

108. In the following questions, a series is given, with one term missing. Choose the correct alternative from the given ones that will complete the series.

T, R, P, N, L, ?, ?.

A. J, G

B. J, H.

C. K, H

D. K,I

Answer: B



Watch Video Solution

109. In the following questions, a series is given, with one term missing. Choose the correct alternative from the given ones that will complete the series.

CDE, IJK, NOP, ?

A. FGH

B. RST

C. TUV

D. GRS

Answer: B



Watch Video Solution

110. In the following questions, a series is given, with one term missing. Choose the correct alternative from the given ones that will complete the series.

Y, S, U, O, Q, ? ?

A. N O

B. K M

C. J K

D. H I

Answer: B



Watch Video Solution

111. In the following questions, a series is given, with one term missing. Choose the correct alternative from the given ones that will complete the series.

EAC, GCE, IEG, ?

A. JHI

B. KGI

C. JGI

D. KIJ

Answer: B



Watch Video Solution

112. In the following questions, a series is given, with one term missing. Choose the correct alternative from the given ones that will complete the series.

FLU, GMV, HNW, IOX, ?.

A. JYP

B. WYP

C. WPY

D. JPY

Answer: D



Watch Video Solution

113. In the following questions, a series is given, with one term missing. Choose the correct alternative from the given ones that will complete the series.

A, P, C, Q, E, R, G, ? , ?.

A. S I

B. H I

C. I S

D. T J

Answer: A



Watch Video Solution

114. In the following questions, a series is given, with one term missing. Choose the correct alternative from the given ones that

will complete the series.

J, Q, I, R, H, S, ?, ?

A. F T

B. G T

C. H U

D. K T

Answer: B



Watch Video Solution

115. In the following questions, a series is given, with one term missing. Choose the correct alternative from the given ones that will complete the series.

CFL, EIK, GLJ, IOI, ?

A. KRH

B. KRJ

C. JRH

D. KOH

Answer: A



Watch Video Solution

116. In the following questions, a series is given, with one term missing. Choose the correct alternative from the given ones that will complete the series.

A, Z, B, Y, C, X, ?, ?.

A. EV

B. WD

C. DW

D. YV

Answer: C



Watch Video Solution

117. In the following questions, a series is given, with one term missing. Choose the correct alternative from the given ones that will complete the series.

AZY, EXW, IVU, ?

A. MTS

B. MQR

C. NRQ

D. LST

Answer: A



Watch Video Solution

118. In the following questions, a series is given, with one term missing. Choose the correct alternative from the given ones that will complete the series.

XGH,WIJ,VKL,UMN, ____.

A. TOP

B. SOP

C. HOW

D. UJI

Answer: A



Watch Video Solution

119. In the following questions, a series is given, with one term missing. Choose the correct alternative from the given ones that will complete the series.

SCD, TEF, UGH, ?, WKL

A. VIJ

B. VJI

C. CMN

D. UJI

Answer: A



Watch Video Solution

120. In the following questions, a series is given, with one term missing. Choose the correct alternative from the given ones that will complete the series.

C A G E K I O M _ _

A. US

B. QS

C. OQ

D. SQ

Answer: D



Watch Video Solution

121. In the following questions, a series is given, with one term missing. Choose the correct alternative from the given ones that

will complete the series.

LXF, MTJ, NPN, OLR, ?

A. PIU

B. PPV

C. PHV

D. PJW

Answer: C



Watch Video Solution

122. In the following questions, a series is given, with one term missing. Choose the correct alternative from the given ones that will complete the series.

BDF, CFI, DHL, ?

A. EJO

B. CJM

C. EML

D. EMI

Answer: A



Watch Video Solution

123. In the following questions, a series is given, with one term missing. Choose the correct alternative from the given ones that will complete the series.

ALN, DNP, GPR, ?

A. KLM

B. JRT

C. RNU

D. RNV

Answer: B



Watch Video Solution

124. In the following questions, a series is given, with one term missing. Choose the correct alternative from the given ones that will complete the series.

QPO, NML, KJI, ?, EDC

A. HGF

B. CAB

C. JKL

D. GHI

Answer: A



Watch Video Solution

125. In the following questions, a series is given, with one term missing. Choose the correct alternative from the given ones that will complete the series.

QAR, RAS, SAT, TAU, ?

A. UAV

B. UAT

C. TAS

D. TAT

Answer: A



Watch Video Solution

126. In the given series one term is missing. Choose the correct alternative from the given ones that will complete the series.

GON, JRQ, MUT, ____.

A. NOG

B. PXW

C. JQR

D. TUM

Answer: B



Watch Video Solution

127. In the following questions, a series is given, with one term missing. Choose the correct alternative from the given ones that

will complete the series.

A C D F G I J L M O P ?

A. Q

B. R

C. S

D. T

Answer: B



Watch Video Solution

128. In the following questions, a series is given, with one term missing. Choose the correct alternative from the given ones that will complete the series.

SFJ, RGK, QHL, ?

A. EMD

B. VIJ

C. PIM

D. PKL

Answer: C



Watch Video Solution

129. In the following questions, a series is given, with one term missing. Choose the correct alternative from the given ones that will complete the series.

a, k, e, o, i, s, ____, ____, q, a, u, e

A. l, v

B. m, v

C. l, w

D. m, w

Answer: D



Watch Video Solution

130. In the following questions, a series is given, with one term missing. Choose the correct alternative from the given ones that will complete the series.

KEC, LFD, MGE, NHF, ?

A. OIF

B. OIG

C. PHG

D. NIG

Answer: B



Watch Video Solution

131. In the following questions, a series is given, with one term missing. Choose the correct alternative from the given ones that will complete the series.

ABDC, GHJI, MNPO, ____.

A. RSQP

B. STRQ

C. RSUT

D. STVU

Answer: D



Watch Video Solution

132. In the following questions, a series is given, with one term missing. Choose the correct alternative from the given ones that will complete the series.

ACE, BDF, CEG, ____.

A. CED

B. DFH

C. DEM

D. HED

Answer: B



Watch Video Solution

133. In the following questions, a series is given, with one term missing. Choose the correct alternative from the given ones that will complete the series.

AZBY, CXDW, EVFU ?

A. SHTG

B. GXHW

C. GTHS

D. STHO

Answer: C



Watch Video Solution

134. In the following questions, a series is given, with one term missing. Choose the correct alternative from the given ones that

will complete the series.

DKM, FJP, HIS, JHV, ?

A. HGY

B. LGZ

C. IGY

D. LGY

Answer: D



Watch Video Solution

135. In the following questions, a series is given, with one term missing. Choose the correct alternative from the given ones that will complete the series.

AZBY, ?, EVFU, GTHS

A. BYCZ

B. CYDR

C. MISG

D. CXDW

Answer: D



Watch Video Solution

136. In the following questions, a series is given, with one term missing. Choose the correct alternative from the given ones that will complete the series.

ELFA, GLHA, ILJA, ____, MLNA

A. OLPA

B. KLMA

C. LLMA

D. KLLA

Answer: D



Watch Video Solution

137. In the following questions, a series is given, with one term missing. Choose the correct alternative from the given ones that will complete the series.

F G H J K L N O P R S ?

A. T

B. M

C. Q

D. U

Answer: A



Watch Video Solution

138. In the following questions, a series is given, with one term missing. Choose the correct alternative from the given ones that will complete the series.

BD, FH, JL, NP, ?

A. PQ

B. RS

C. SU

D. RT

Answer: D



Watch Video Solution

139. Choose the missing terms out of the given alternatives

NZ, OY, PX, QW, RV,?

A. FS

B. SU

C. UF

D. TU

Answer: B



Watch Video Solution

140. In the following questions, a series is given, with one term missing. Choose the correct alternative from the given ones that

will complete the series.

F, L, Q, U, X, ?

A. B

B. Z

C. Y

D. A

Answer: B



Watch Video Solution

141. A series is given, with one term missing. Choose the correct alternative from the given ones that will complete the series.

A, E, I, ? Q

A. O

B. M

C. U

D. L

Answer: B



Watch Video Solution

142. In the following questions, a series is given, with one term missing. Choose the correct alternative from the given ones that will complete the series.

Identify the next letter in the following series: a d c e b e d f c f e

?

A. h

B. g

C. f

D. d

Answer: B



Watch Video Solution

143. In the following questions, a series is given, with one term missing. Choose the correct alternative from the given ones that will complete the series.

YYZ, VYZ, SYZ, PYZ, ?

A. TYZ

B. RYZ

C. MYZ

D. XYZ

Answer: C



Watch Video Solution

144. In the following questions, a series is given, with one term missing. Choose the correct alternative from the given ones that will complete the series.

AZ, CX, EV, GT, ____, KP, ____.

A. IR and NM

B. RI and MN

C. RI and NM

D. IR and MN

Answer: D



Watch Video Solution

145. In the following questions, a series is given, with one term missing. Choose the correct alternative from the given ones that will complete the series.

T Q N K H E B Y V S P ? ? ?

A. NKG

B. NKI

C. MJG

D. MJH

Answer: C



Watch Video Solution

146. In the following questions, a series is given, with one term missing. Choose the correct alternative from the given ones that will complete the series.

EFA, GHC, IJE, ?

A. JKG

B. KLG

C. HIF

D. KDA

Answer: B



Watch Video Solution

147. In the following questions, a series is given, with one term missing. Choose the correct alternative from the given ones that

will complete the series.

NP MK RT IG ?

A. UW

B. FD

C. EC

D. VX

Answer: D



Watch Video Solution

148. A series is given, with one term missing. Choose the correct alternative from the given ones.

ABEF, IJMN, ?

A. QRVU

B. QRUV

C. QRVW

D. QSVU

Answer: B



Watch Video Solution

149. In the following questions, a series is given, with one term missing. Choose the correct alternative from the given ones that will complete the series.

EJO, FKP, GLQ, HMR, ?

A. ABC

B. DEF

C. MNO

D. INS

Answer: D



Watch Video Solution

150. In the following questions, a series is given, with one term missing. Choose the correct alternative from the given ones that will complete the series.

B O C N D M E ? ?

A. LF

B. OP

C. KL

D. EF

Answer: A



Watch Video Solution

151. In the following questions, a series is given, with one term missing. Choose the correct alternative from the given ones that will complete the series.

BEH, DGJ, NQT, ?

A. TKL

B. GHD

C. JMP

D. RMO

Answer: C



Watch Video Solution

152. In the following questions, a series is given, with one term missing. Choose the correct alternative from the given ones that will complete the series.

deb, ijg, nol ? , xyv

A. stq

B. rsp

C. rsq

D. stp

Answer: A



Watch Video Solution

153. In the following questions, a series is given, with one term missing. Choose the correct alternative from the given ones that will complete the series.

bc, cde, de, efg, fg, ?

A. ijk

B. ghi

C. fgh

D. hij

Answer: B



Watch Video Solution

154. In the following questions, a series is given, with one term missing. Choose the correct alternative from the given ones that

will complete the series.

AFI, JOR, MRU, ?

A. RJL

B. GJN

C. HMP

D. PMO

Answer: C



Watch Video Solution

155. In the following questions, a series is given, with one term missing. Choose the correct alternative from the given ones that will complete the series.

KJL, ONP, SRT, ?

A. WVX

B. WWX

C. WXV

D. VUW

Answer: A



Watch Video Solution

156. In the following questions, a series is given, with one term missing. Choose the correct alternative from the given ones that will complete the series.

AN, BO, CP, DQ , ?

A. EG

B. ER

C. EH

D. EF

Answer: B



Watch Video Solution

157. In the following questions, a series is given, with one term missing. Choose the correct alternative from the given ones that will complete the series.

CZA, GYE, KXI, ?

A. NWL

B. ONM

C. OMW

D. OWM

Answer: D



Watch Video Solution

158. In the following questions, a series is given, with one term missing. Choose the correct alternative from the given ones that will complete the series.

Find the missing term of the series.

AAT, BBE, CCP, ?

A. DDA

B. DDB

C. DDC

D. DDD

Answer: A

[Watch Video Solution](#)

159. In the following questions, a series is given, with one term missing. Choose the correct alternative from the given ones that will complete the series.

X, Q, K, F, ____.

A. C

B. D

C. E

D. B

Answer: D

[Watch Video Solution](#)

160. In the following questions, a series is given, with one term missing. Choose the correct alternative from the given ones.

BEAG, DGCI, FIEK, _____ .

A. HGKJ

B. HKLJ

C. HMIE

D. HKGM

Answer: D



Watch Video Solution

161. In the following questions, a series is given with one term missing. Choose the correct alternative form the given ones that

will complete the series.

N, P, R, ?

A. T

B. U

C. O

D. V

Answer: A



Watch Video Solution

162. In the following questions, a series is given, with one term missing. Choose the correct alternative from the given ones that will complete the series.

ELFA, GLHA, ILJA, ____, MLNA

A. OLPA

B. KLMA

C. LLMA

D. KLLA

Answer: D



Watch Video Solution

163. Choose the correct alternative from the given ones that will complete the series.

FGHJKLNOPRS?

A. T

B. M

C. Q

D. U

Answer: A



Watch Video Solution

164. In the following questions, a series is given, with one term missing. Choose the correct alternative from the given ones that will complete the series.

BC, GH, LM, ?

A. PQ

B. RS

C. QR

D. OP

Answer: C



Watch Video Solution

165. In the following questions, a series is given, with one term missing. Choose the correct alternative from the given ones that will complete the series.

AC, FH, ? M

A. L

B. J

C. M

D. N

Answer: C



Watch Video Solution

166. In the following questions, a series is given, with one term missing. Choose the correct alternative from the given ones that will complete the series.

AC, FH, KM, PR, ?

A. UX

B. TV

C. UW

D. VW

Answer: C



Watch Video Solution

167. In the following questions, a series is given, with one term missing. Choose the correct alternative from the given ones that will complete the series.

M E N I P O ___, ___

A. QI

B. PA

C. QU

D. QO

Answer: C



Watch Video Solution

168. In each of the following questions, a series is given, with one term missing. Choose the correct alternative from the given

ones that will complete the series

LMN, MNOP, NOPQR, ?

A. OPQRST

B. RSTUVW

C. QRSTUV

D. PQRSTU

Answer: A



Watch Video Solution

169. In the following questions, a series is given, with one term missing. Choose the correct alternative from the given ones that will complete the series.

ACE, BDF, CEG, ____.

A. DEF

B. DFH

C. DEH

D. DFE

Answer: B



Watch Video Solution

170. In the following questions, a series is given, with one term missing. Choose the correct alternative from the given ones that will complete the series.

ABC, PQR, DEF,STU, ____.

A. VWX

B. GHI

C. IJK

D. GKL

Answer: B



Watch Video Solution

171. In the following questions, a series is given, with one term missing. Choose the correct alternative from the given ones that will complete the series.

FAG, GAF, HAI, IAH, _____.

A. JAK

B. HAK

C. JAI

D. HAL

Answer: A



Watch Video Solution

172. Choose the correct alternative from the given ones that will complete the series.

BCB,DED, FGF, HIH, ?

A. JHJ

B. IJI

C. JKJ

D. HJH

Answer: C



Watch Video Solution

173. In the following questions, a series is given, with one term missing. Choose the correct alternative from the given ones that will complete the series.

MNBA, OPDC, QRFE, ?

A. STGH

B. STKH

C. STKJ

D. STHG

Answer: D



Watch Video Solution

174. In the following questions, a series is given, with one term missing. Choose the correct alternative from the given ones that

will complete the series.

ADGJ, YVSP, KNQT, ?

A. SVZB

B. QTWZ

C. OLIF

D. LORU

Answer: C



Watch Video Solution

175. In the following questions, a series is given, with one term missing. Choose the correct alternative from the given ones that will complete the series.

BMX, DNW, FOU, ____.

A. GH0

B. GPS

C. HPS

D. HPT

Answer: D



Watch Video Solution

176. In the following questions, a series is given, with one term missing. Choose the correct alternative from the given ones that will complete the series.

DHK, GKN, JNQ, ____.

A. MRU

B. MQT

C. LPS

D. NRU

Answer: B



Watch Video Solution

177. In the following questions, a series is given, with one term missing. Choose the correct alternative from the given ones that will complete the series.

TMJ, QNL, NON, KPP, ____.

A. JQR

B. HQR

C. HQQ

D. IQS

Answer: B



Watch Video Solution

178. Choose the correct alternative from the given ones that will complete the series.

A,CD, GHI, ____, UVWXYZ

A. LMNP

B. MNOL

C. NOPL

D. MNOP

Answer: D



Watch Video Solution

179. In the following questions, a series is given, with one term missing. Choose the correct alternative from the given ones that will complete the series.

ELFA, GLHA, ILJA, ____, MLNA

A. ILMA

B. KLLA

C. OLPA

D. KLMA

Answer: B



Watch Video Solution

180. In the following questions, a series is given, with one term missing. Choose the correct alternative from the given ones that

will complete the series.

Z, U, Q, ?, L

A. I

B. K

C. M

D. N

Answer: D



Watch Video Solution

181. In the following questions, a series is given, with one term missing. Choose the correct alternative from the given ones that will complete the series.

AD, EI, JN, PS, ?

A. WY

B. XX

C. WX

D. WW

Answer: C



Watch Video Solution

182. In the following questions, a series is given, with one term missing. Choose the correct alternative from the given ones that will complete the series.

PON, RQP, TSR, VUT, ?

A. WUY

B. YXZ

C. XWV

D. UVW

Answer: C



Watch Video Solution

183. In the following questions, a series is given, with one term missing. Choose the correct alternative from the given ones that will complete the series.

ar, cs, et, ?

A. wy

B. gv

C. vb

D. gu

Answer: D



Watch Video Solution

184. In the following questions, a series is given, with one term missing. Choose the correct alternative from the given ones that will complete the series.

CBA, ABC, ABCD, DCBA, ABCDE, ?

A. EDCBA

B. DBAC

C. CABD

D. BACD

Answer: A



Watch Video Solution

185. In the following questions, a series is given, with one term missing. Choose the correct alternative from the given ones that will complete the series.

CE, GI, KM, OQ, ?

A. TW

B. TV

C. SU

D. RT

Answer: C



Watch Video Solution

186. In the following questions, a series is given, with one term missing. Choose the correct alternative from the given ones that will complete the series.

R, O, L, I, F, ?

A. C

B. A

C. E

D. I

Answer: A



Watch Video Solution

187. In the following questions, a series is given, with one term missing. Choose the correct alternative from the given ones that

will complete the series.

ICE, JDF, KEG, LFH, ?

A. MIG

B. MHG

C. MGI

D. HHI

Answer: C



Watch Video Solution

188. In the following questions, a series is given, with one term missing. Choose the correct alternative from the given ones that will complete the series.

EFGH, MNOP, QRST, ?

A. QRTS

B. VLMN

C. UVWX

D. JIKH

Answer: C



Watch Video Solution

189. In the following questions, a series is given, with one term missing. Choose the correct alternative from the given ones that will complete the series.

BY, GT, LO, ?, VE

A. PJ

B. QJ

C. QK

D. QP

Answer: B



Watch Video Solution

190. In the following questions, a series is given, with one term missing. Choose the correct alternative from the given ones that will complete the series.

1. A, C, E 2. B, D, F.

3. G, I, K. 4. ?

A. L, J, H

B. Z, Y, X

C. H, J, L

D. K, L, M

Answer: C



Watch Video Solution

191. In the following questions, a series is given, with one term missing. Choose the correct alternative from the given ones that will complete the series.

KK M LL N MM O NN P OO Q P?

A. PQ

B. ST

C. QV

D. PR

Answer: D



Watch Video Solution

192. In the following questions, a series is given, with one term missing. Choose the correct alternative from the given ones that will complete the series.

AZ, CX, FU, ?

A. IR

B. IV

C. JQ

D. KP

Answer: C



Watch Video Solution

193. In the following questions, a series is given, with one term missing. Choose the correct alternative from the given ones that will complete the series.

ZYX ABC WV DE U,___ .

A. V

B. F

C. T

D. E

Answer: B



Watch Video Solution

194. In the following questions, a series is given, with one term missing. Choose the correct alternative from the given ones that will complete the series.

BC ZY DE WV FG UT H ___.

A. Q

B. S

C. J

D. I

Answer: D



Watch Video Solution

195. In the following questions, a series is given, with one term missing. Choose the correct alternative from the given ones that

will complete the series.

ADG, GJM, ?

A. MOQ

B. MPS

C. NOT

D. WTO

Answer: B



Watch Video Solution

196. In the following questions, a series is given, with one term missing. Choose the correct alternative from the given ones that will complete the series.

A C F K ?

A. D

B. O

C. R

D. I

Answer: C



Watch Video Solution

197. In the following questions, a series is given, with one term missing. Choose the correct alternative from the given ones that will complete the series.

K H E

B Y V

S ? M

A. R

B. P

C. O

D. L

Answer: B



Watch Video Solution

198. In the following questions, a series is given, with one term missing. Choose the correct alternative from the given ones that will complete the series.

FAK IEM LIO ?

A. OMQ

B. OPQ

C. MNO

D. NOP

Answer: A



Watch Video Solution

199. In the following questions, a series is given, with one term missing. Choose the correct alternative from the given ones that will complete the series.

AZBY, CXDW, EVFU, ?

A. SHTGS

B. GXHW

C. GTHS

D. STHO

Answer: C



Watch Video Solution

200. In the following questions, a series is given, with one term missing. Choose the correct alternative from the given ones that will complete the series.

BCD, DBC, EFG, ?, HIJ

A. IJH

B. GEF

C. EGF

D. FEG

Answer: B



Watch Video Solution

201. In the following questions, a series is given, with one term missing. Choose the correct alternative from the given ones that will complete the series.

A, Z, B, Y, C, X, D, W, E, V, F, U, G, ?

A. T

B. R

C. V

D. S

Answer: A



Watch Video Solution

202. In the following questions, a series is given, with one term missing. Choose the correct alternative from the given ones that will complete the series.

EZ FY XG ?

A. WG

B. GW

C. WH

D. HW

Answer: C



Watch Video Solution

203. In the following questions, a series is given, with one term missing. Choose the correct alternative from the given ones that

will complete the series.

OTE, PUF, QVG, RWH, ?

A. SXI

B. SYJ

C. TXI

D. SXJ

Answer: A



Watch Video Solution

204. In the following questions, a series is given, with one term missing. Choose the correct alternative from the given ones that will complete the series.

AFKPU, BGLQV, CHMRW, ?

A. VQLGB

B. DINSX

C. KLMNO

D. UVWXY

Answer: B



Watch Video Solution

205. In the following questions, a series is given, with one term missing. Choose the correct alternative from the given ones that will complete the series.

AZ, CX, FU, ?

A. IV

B. JQ

C. KP

D. IR

Answer: B



Watch Video Solution

206. In the following questions, a series is given, with one term missing. Choose the correct alternative from the given ones that will complete the series.

Y, T, P, ?, K

A. M

B. L

C. O

D. N

Answer: A



Watch Video Solution

207. In the following questions, a series is given, with one term missing. Choose the correct alternative from the given ones that will complete the series.

T, R, P, N, ?

A. V

B. M

C. L

D. E

Answer: C



Watch Video Solution

208. In the following questions, a series is given, with one term missing. Choose the correct alternative from the given ones that will complete the series.

Z,X,V,T,R,?,N

A. P

B. Q

C. S

D. O

Answer: A



Watch Video Solution

209. In the following questions, a series is given, with one term missing. Choose the correct alternative from the given ones that will complete the series.

A D H M S ?

A. X

B. T

C. W

D. Z

Answer: D



Watch Video Solution

210. In the following questions, a series is given, with one term missing. Choose the correct alternative from the given ones that

will complete the series.

A C E Z X V G I K T R P ?

A. L

B. Q

C. N

D. M

Answer: D



Watch Video Solution

211. In the following questions, a series is given, with one term missing. Choose the correct alternative from the given ones that will complete the series.

AC, EG, IK, ?

A. LM

B. ON

C. OP

D. MO

Answer: D



Watch Video Solution

212. Choose the correct alternative from the given ones that will complete the series.

H I J P Q R D E F ? V W

A. N

B. J

C. H

D. U

Answer: D



Watch Video Solution

213. In each of the following questions, a series is given, with one term missing. Choose the correct alternative from the given ones that will complete the series.

ACE, GIK, MOQ, ?

A. SUW

B. UVW

C. STY

D. RTU

Answer: A



Watch Video Solution

214. In each of the following questions, a series is given, with one term missing. Choose the correct alternative from the given ones that will complete the series.

LMnP, PQrT, TUvX, ?

A. PRsT

B. UVwY

C. XYzB

D. WWnP

Answer: C



Watch Video Solution

215. A series is given, with one term missing. Choose the correct alternative from the given ones that will complete the series

IGT, JHS, KIR, LJQ, MKP, ?

(A) LOP

(B) NOP

(C) NLO

(D) LNC

A. LOP

B. NOP

C. NLO

D. LNO

Answer: C



Watch Video Solution

216. A series is given, with one term missing. Choose the correct alternative from the given ones that will complete the series.

XFB,UGD,RIG,OLK, ?

- A. OLJ
- B. LNK
- C. LPP
- D. OLM

Answer: C



Watch Video Solution

217. In the following question, a series is given with one alphabet missing. Choose the correct alternative from the given

options.

L, C, M, B, N, A, O ?

A. B

B. P

C. Q

D. Z

Answer: D



Watch Video Solution

218. In the following questions, a series is given, with one term missing. Choose the correct alternative from the given ones that will complete the series.

A Z B Y C ___, ____.

A. U

B. V

C. W

D. X

Answer: D



Watch Video Solution

219. A series is given, with one term missing Choose the correct alternative from the given ones that will complete the series :

CUS, DVT, EWU, _

A. FXV

B. VXF

C. XFV

D. XV F

Answer: A



Watch Video Solution

220. A series is given, with one term missing. Choose the correct alternative from the given ones that will complete the series :

DCB, HGF, ? PON

A. LKJ

B. QRO

C. SUM

D. XZY

Answer: A



Watch Video Solution

[Watch Video Solution](#)

221. A series is given, with one/two term missing. Choose the correct alternative from the given ones that will complete the series.

ZbYa XdWc VfUe ?

A. TgSh

B. ThSg

C. ThSi

D. ShTg

Answer: B

[Watch Video Solution](#)

222. In the following question, a series is given with one or more alphabet missing. Choose the correct alternative from the given options.

ACF, BEI, CGL, DIO, ?

A. EGJ

B. EKG

C. EHL

D. EKR

Answer: D



Watch Video Solution

223. In the following question, a series is given with one or more alphabet missing. Choose the correct alternative from the given

options.

A, ?, I, O, ?

A. D, T

B. F, V

C. E, U

D. C, W

Answer: C



Watch Video Solution

224. In the following question, a series is given in which one or more alphabet is missing. Choose the correct alternative from the given options.

ADC, EHG, ILK, ?

A. MNO

B. MPO

C. MON

D. MPQ

Answer: B



Watch Video Solution

225. In the following question, a series is given with term missing. Choose the correct alternative from the given options.

BE, DH, ?,?, HN, JQ

A. FI

B. FK

C. GI

D. GK

Answer: B



Watch Video Solution

226. In the following question, a series is given with one or more alphabet missing. Choose the correct alternative from the given options.

E-D-C-B, J-H-F-D, O-L-I-?

A. R

B. A

C. E

D. F

Answer: D



Watch Video Solution

227. A series is given with one term missing. choose the correct alternative from the given ones that will complete the series.

JAZ, LEX, NIV, PMT, ?

A. QUR

B. RQR

C. SUR

D. RUS

Answer: B



Watch Video Solution

228. Find the missing term of the following series :

GEFH, ZXYA, SORT, ?

A. LJKM

B. KILN

C. JGIO

D. NLMO

Answer: A



Watch Video Solution

229. Choose the correct alternative from the given ones that will complete the series

BFK, KOT, UYD, ?

A. BFJ

B. ADG

C. FJO

D. PSX

Answer: C



Watch Video Solution

230. A series is given, with one term missing. Choose the correct alternative from the given ones that will complete the series.

EDBA, KJHG, QPNM, ?

A. WVTS

B. WXUV

C. WVST

D. WVTX

Answer: A



Watch Video Solution

231. A series is given, with one term missing. Choose the correct alternative from the given ones that will complete the series.

NOM, QRP, TUS, ?

A. WAX

B. HUT

C. WXV

D. HTU

Answer: C



Watch Video Solution

[Watch Video Solution](#)

232. In the following questions, a series is given, with one term missing. Choose the correct alternative from the given ones that will complete the series.

BE, HK, NQ, ?

- A. EI
- B. UX
- C. UV
- D. XY

Answer: B

[Watch Video Solution](#)

233. Find the missing letters from the given alternatives :

AEN MQZ CGP ?

A. OSB

B. PUE

C. MPX

D. OTC

Answer: A



Watch Video Solution

234. In the following questions, a series is given, with one term missing. Choose the correct alternative from the given ones that will complete the series.

SCD, TEF, UGH, ?, WKL

A. CMN

B. VJI

C. VIJ

D. IJT

Answer: C



Watch Video Solution

235. find the missing terms.

PMT, OOS, NQR, MSQ, ?

A. LVR

B. LVP

C. LWP

D. LUP

Answer: D



Watch Video Solution

236. A series is given with one term missing. Choose the correct alternative from the given ones :

CAR, GCO, KEL, OGI, ?

A. SIK

B. SIF

C. TIK

D. TIL

Answer: B



Watch Video Solution

[Watch Video Solution](#)

237. In the following questions, a series is given, with one term missing. Choose the correct alternative from the given ones that will complete the series.

NOA, PQB, RSC, ?

A. TUD

B. TVD

C. TUE

D. TVE

Answer: A

[Watch Video Solution](#)

238. A series is given, with one term missing. Choose the correct alternative from the given ones that will complete the series :

CBA, FED, IHG, LKJ, ?

A. PRT

B. VUT

C. ONM

D. ZYX

Answer: C



Watch Video Solution

239. A series is given, with one term missing. Choose the correct alternative from the given ones that will complete the series.

WFB, TGD, QHG, ?

A. NIL

B. NIK

C. NLK

D. NJL

Answer: B



Watch Video Solution

240. A series is given, with one term missing. Choose the correct alternative from the given ones that will complete the series :

B, F, K, Q, ?

A. X

B. R

C. T

D. Y

Answer: A



Watch Video Solution

241. In the following questions, a series is given, with one term missing. Choose the correct alternative from the given ones that will complete the series.

$$\frac{W}{S}, \frac{U}{O}, \frac{S}{K}, \frac{Q}{G}, ?$$

A. $\frac{P}{R}$

B. $\frac{C}{O}$

C. $\frac{R}{J}$

D. $\emptyset C$

Answer: D



Watch Video Solution

242. A series is given, with one term missing. Choose the correct alternative from the given ones that will complete the series.

ACE, GJI, MQM, ?

A. SXQ

B. RWQ

C. SUQ

D. RXP

Answer: A



Watch Video Solution

243. In the following questions, a series is given, with one term missing. Choose the correct alternative from the given ones that will complete the series.

AZ, CX, FU, ?

A. IR

B. IV

C. JO

D. KP

Answer: C



Watch Video Solution

244. In the following questions, a series is given, with one term missing. Choose the correct alternative from the given ones that

will complete the series.

ELFA, GLHA, ILJA, ____, MLNA

A. OLPA

B. KLMA

C. LLMA

D. KLLA

Answer: D



Watch Video Solution

245. In the following questions, a series is given, with one term missing. Choose the correct alternative from the given ones that will complete the series.

BDF, CFI, DHL, ?

A. EJO

B. CJM

C. EML

D. EMI

Answer: A



Watch Video Solution

246. In the following questions, a series is given, with one term missing. Choose the correct alternative from the given ones that will complete the series.

WYV, ?, IKH, BDA

A. OPR

B. ROP

C. PRO

D. OQH

Answer: C



Watch Video Solution

247. A series is given, with one term missing. Choose the correct alternative from the given ones that will complete the series :

FED, IHG, LKJ, ONM, ?

A. MKJ

B. VUT

C. CBA

D. RQP

Answer: D



Watch Video Solution

248. A series is given, with one term missing. Choose the correct alternative from the given ones that will complete the series.

LMA, NOB, PQC, ?, STE

A. TUV

B. RSD

C. DOA

D. BRD

Answer: B



Watch Video Solution

249. Choose the correct alternative from the given ones that will complete the series.

CAT, DBT, ECT, ?

A. DCT

B. FDT

C. FCT

D. FAT

Answer: B



Watch Video Solution

250. A series is given, with one term missing. Choose the correct alternative from the given ones that will complete the series.

ZXV, USO, PNL, ?

A. MJH

B. JHF

C. KIG

D. KJI

Answer: C



Watch Video Solution

251. A series is given, with one term missing. Choose the correct alternative from the given ones that will complete the series.

TQNKHEBYVSP ? ? ?

A. NKG

B. NKI

C. MJG

D. MJH

Answer: C



Watch Video Solution

252. In the following questions, a series is given, with one term missing. Choose the correct alternative from the given ones that will complete the series.

BMX, DNW, FOU, ____.

A. GHO

B. HGO

C. HPS

D. HPT

Answer: C



Watch Video Solution

253. In the following questions, a series is given, with one term missing. Choose the correct alternative from the given ones that will complete the series.

deb, ijg, nol ? , xyv

A. sta

B. rsp

C. rsq

D. stp

Answer: A



Watch Video Solution

254. In the given series one term is missing. Choose the correct alternative from the given ones that will complete the series.

XBC, WFG, VJK,?

A. XGH

B. UNO

C. YFG

D. WKL

Answer: B



Watch Video Solution

255. A series is given, with one term missing. Choose the correct alternative from the given ones that will complete the series :

ANZ, CJV, EGR, GEN, ?

A. JDJ

B. IEK

C. IDJ

D. JEK

Answer: C



Watch Video Solution

256. A series is given, with one term missing. Choose the correct alternative from the given ones that will complete the series :

BXM, EUP, HRS, ?

A. XZY

B. RPN

C. VTU

D. KOV

Answer: D



Watch Video Solution

257. A series is given, with one term missing. Choose the correct alternative from the given ones that will complete the series.

CL, HO, MU, ?

A. RA

B. OZ

C. SB

D. TC

Answer: A



Watch Video Solution

258. A series is given, with one term missing. Choose the correct alternative from the given ones that will complete the series.

ABC, BEH, CHM, ?, ENW

A. DKS

B. DJP

C. DLS

D. DKR

Answer: D



Watch Video Solution

259. A series is given, with one term missing. Choose the correct alternative from the given ones that will complete the series :

ZWT, VSP, ROL, ?

A. QNL

B. MPK

C. NKH

D. PLI

Answer: C



Watch Video Solution

260. A series is given with one term missing. Choose the correct alternative from the given ones that will complete the series.

HK, ?, PQ, TT, XW

A. LN

B. NO

C. LK

D. NM

Answer: A



Watch Video Solution

261. A series is given with one term missing. Choose the correct alternative from the given ones that will complete the series.

JN, OR, UW, BC, ?

A. KM

B. JJ

C. JK

D. KJ

Answer: B



Watch Video Solution

262. A series is given with one term missing. Choose the correct alternative from the given ones that will complete the series.

EFGHI, LMNO, RST, WX, ?

A. A

B. D

C. B

D. E

Answer: A



Watch Video Solution

[Watch Video Solution](#)

263. A series is given with one term missing. Choose the correct alternative from the given ones that will complete the series.

TU, DE, NO, ?

A. PQ

B. FG

C. XY

D. VW

Answer: C

[Watch Video Solution](#)

264. Choose the correct alternative from the given ones that will complete the series.

CAT, DBT, ECT, ?

A. DCT

B. FDT

C. FCT

D. FAT

Answer: B



Watch Video Solution

265. In the following questions, a series is given, with one term missing. Choose the correct alternative from the given ones that

will complete the series.

BDF, CFI, DHL, ?

A. EIM

B. EJO

C. EMI

D. CUM

Answer: B



Watch Video Solution

266. A series is given with one term missing. Choose the correct alternative from the given ones that will complete the series.

I, V, ?, L.

A. C

B. D

C. M

D. X

Answer: D



View Text Solution

267. A series is given with one term missing. Choose the correct alternative from the given ones that will complete the series.

VWX, BCD, HIJ, ?

A. MOQ

B. NOP

C. GHI

D. TUV

Answer: B



Watch Video Solution

268. A series is given with one term missing. Choose the correct alternative from the given ones that will complete the series.

MN, PQ, TU, YZ, ?

A. YZ

B. AB

C. EF

D. EJ

Answer: C



Watch Video Solution

269. A series is given with one term missing. Choose the correct alternative from the given ones that will complete the series.

HT, JR, MO, ?

A. QK

B. QL

C. PK

D. PL

Answer: A



Watch Video Solution

270. A series is given with one term missing. Choose the correct alternative from the given ones that will complete the series.

HIJ, KMO, PSV, ?

A. XYZ

B. WAD

C. WZD

D. WAE

Answer: C



Watch Video Solution

271. A series is given with one term missing. Choose the correct alternative from the given ones that will complete the series.

EFGHI, LMNO, RST, WX, ?

A. A

B. D

C. B

D. E

Answer: A



Watch Video Solution

272. A series is given with one term missing. Choose the correct alternative from the given ones that will complete the series.

TU, DE, NO, ?

A. PQ

B. FG

C. XY

D. VW

Answer: C



Watch Video Solution

273. A series is given with one term missing. Choose the correct alternative from the given ones that will complete the series :

PRQ, TVU, YAZ, ?

A. BDC

B. EGF

C. DFE

D. EFG

Answer: B

274. A series is given with one term missing. Choose the correct alternative from the given ones that will complete the series :

ML, HG, CB, ?

A. XW

B. YX

C. WX

D. ZY

Answer: A



Watch Video Solution

275. A series is given with one term missing. Choose the correct alternative from the given ones that will complete the series.

YXW, TSR, NML, ?

A. EFG

B. GFE

C. FEG

D. HGF

Answer: B



Watch Video Solution

276. A series is given with one term missing. Choose the correct alternative from the given ones that will complete the series.

B, D, H, P, ?

A. E

B. D

C. C

D. F

Answer: D



Watch Video Solution

277. A series is given with one term missing. Choose the correct alternative from the given ones that will complete the series.

AK, CO, ES, ?

A. NO

B. FH

C. GW

D. GV

Answer: C



Watch Video Solution

[Watch Video Solution](#)

278. A series is given with one term missing. Choose the correct alternative from the given ones that will complete the series.

CDE, HIJ, MNO, ?

A. KNM

B. TRS

C. QRS

D. RST

Answer: D

[Watch Video Solution](#)

279. A series is given with one term missing. Choose the correct alternative from the given ones that will complete the series.

CD, FA, IX, LU, ?

A. TU

B. RS

C. OP

D. OR

Answer: D



Watch Video Solution

280. A series is given with one term missing. Choose the correct alternative from the given ones that will complete the series.

RT, ? , ZB , DF

A. WX

B. VX

C. VY

D. UV

Answer: B



Watch Video Solution

281. A series is given with one term missing. Select the correct alternative from the given ones that will complete the series.

VW, XU, ZS, BQ, ?

A. OD

B. DO

C. EO

D. FO

Answer: B



Watch Video Solution

282. A series is given with one term missing. Select the correct alternative from the given ones that will complete the series.

AN, DQ, GT, JW, ?

A. MA

B. NZ

C. MZ

D. LY

Answer: C



Watch Video Solution

[Watch Video Solution](#)

283. A series is given with one term missing. Select the correct alternative from the given ones that will complete the series :

B, C, F, E, J, G, N, I, ?, ?

A. R, M

B. R, L

C. R, K

D. R, S

Answer: C

[Watch Video Solution](#)

284. Direction : A series is given with one term missing. Choose the correct alternative from the given ones:

ELP, HNS, KPV, ? / निर्देश : निम्नलिखित प्रत्येक प्रश्न में एक अनुक्रम दिया है, जिसमें एक पद लुप्त है। दिये गये विकल्पों में से सही विकल्प चुनिये जो अनुक्रम को पूरा करे :

ELP, HNS, KPV, ?

A. NRY

B. UXZ

C. OXY

D. SVW

Answer: A



Watch Video Solution

285. A series is given with one term missing. Choose the correct alternative from the given ones that will complete the series.

DP, EY, FJ, ?

A. GX

B. GS

C. GT

D. GW

Answer: D



Watch Video Solution

286. A series is given with one term missing. Choose the correct alternative from the given ones that will complete the series.

DAF, FED, HIB, ?

A. JMZ

B. JOY

C. LUX

D. JOZ

Answer: A



Watch Video Solution

287. A series is given with one term missing. Out of the four alternatives, choose the alternative that will complete the series

:

ACE, GIK, ?, SUW, YAC

A. MOP

B. MOQ

C. MPO

D. MNP

Answer: B



Watch Video Solution

288. In each of the following questions, a series is given with one term missing. Out of the four alternatives, choose the alternative that will complete the series.

BKS, DJT, FIU, HHV, ?

A. IGU

B. IGX

C. JGW

D. IJX

Answer: C



Watch Video Solution

289. A series is given with one term missing. Select the correct alternative from the given ones that will complete the series.

A, B, D, G, ?

A. K

B. J

C. L

D. I

Answer: A



Watch Video Solution

290. A series is given with one term missing. Select the correct alternative from the given ones that will complete the series.

VWR, TUP, RSN, ?

A. PLQ

B. PQL

C. LPQ

D. PRM

Answer: B



Watch Video Solution

291. A series is given with one term missing. Select the correct alternative from the given ones that will complete the series.

R, M, I, F, D, ?

A. B

B. C

C. A

D. E

Answer: B



Watch Video Solution

292. A series is given with one term missing. Select the correct alternative from the given ones that will complete the series.

K, M, O, Q, ?

A. T

B. R

C. S

D. U

Answer: C



Watch Video Solution

293. A series is given with one term missing. Select the correct alternative from the given ones that will complete the series.

GD, DI, AP, XY, ?

A. UH

B. IU

C. ST

D. UJ

Answer: D



Watch Video Solution

[Watch Video Solution](#)

294. A series is given with one term missing. Select the correct alternative from the given ones that will complete the series.

WVU, TSR, QPO, ?

A. NML

B. LMN

C. LMK

D. KLM

Answer: A

[Watch Video Solution](#)

295. A series is given with one term missing. Select the correct alternative from the given ones that will complete the series

P, M, J, G, ?

A. E

B. C

C. F

D. D

Answer: D



Watch Video Solution

296. A series is given with one term missing. Select the correct alternative from the given ones that will complete the series

AA, DB, IC, PD, ?

A. WF

B. XE

C. YE

D. WE

Answer: C



Watch Video Solution

297. A series is given with one term missing. Select the correct alternative from the given ones that will complete the series.

T, R, O, M, J, H, ?

A. F

B. G

C. D

D. E

Answer: D



Watch Video Solution

298. A series is given with one term missing. Select the correct alternative from the given ones that will complete the series.

ABC, BDF, CFI, ?

A. DLH

B. LDH

C. DIL

D. DHL

Answer: D



Watch Video Solution

[Watch Video Solution](#)

299. A series is given with one term missing. Select the correct alternative from the given ones that will complete the series.

A, C, E, G, ?

A. H

B. I

C. J

D. F

Answer: B

[Watch Video Solution](#)

300. In the following questions, a series is given, with one term missing. Choose the correct alternative from the given ones that will complete the series.

CEG, IKM, OQS, ?

A. UWY

B. UYX

C. UVY

D. TWY

Answer: A



Watch Video Solution

301. A series is given with one term missing. Select the correct alternative from the given ones that will complete the series :

BT, DR, FP, ?

A. HO

B. HN

C. NH

D. OH

Answer: B



Watch Video Solution

302. A series is given with one term missing. Select the correct alternative from the given ones that will complete the series:

A, E, I, M, ?

A. P

B. Q

C. R

D. O

Answer: B



Watch Video Solution

303. A series is given with one term missing. Select the correct alternative from the given ones that will complete the series :

A, E, J, N, S, W, ?

A. Z

B. A

C. B

D. C

Answer: C



Watch Video Solution

304. A series is given, with one term missing. Choose the correct alternative from the given ones that will complete the series :

XXXOXXX, XXXXOXX, XXOXXXX, XXXXXOX, XOXXXXX, ?

A. XXXXXXO

B. OXXXXXXO

C. XXXOXXX

D. XXXXXX

Answer: A



Watch Video Solution

305. A series is given, with one term missing. Choose the correct alternative from the given ones that will complete the series.

XXXXXO, XXXXOX, XXXOXX, XXOXXX, XOXXXX, ?

A. OXXXXX

B. OXXXXO

C. OXXXOX

D. XXXXXX

Answer: A



Watch Video Solution

306. A series is given, with one term missing. Choose the correct alternative from the given ones that will complete the series :

CDE, IHG, KLM, OPO, STU, ?

A. YXW

B. WXY

C. XYW

D. XWY

Answer: A



Watch Video Solution

307. A series is given, with one term missing. Choose the correct alternative from the given ones that will complete the series :

L, N, Q, S, V, ?

A. W

B. Y

C. Z

D. X

Answer: D



Watch Video Solution

308. A series is given with one term missing. Select the correct alternative from the given ones that will complete the series.

R, M, I, F, D, ?

A. B

B. C

C. A

D. E

Answer: B



Watch Video Solution

[Watch Video Solution](#)

309. A series is given with one term missing. Select the correct alternative from the given ones that will complete the series.

AB, CD, EF, GH, ?

A. HJ

B. HK

C. IJ

D. JI

Answer: C

[Watch Video Solution](#)

310. A series is given with one term missing. Select the correct alternative from the given ones that will complete the series.

CDH, FGK, IJN, ?

A. LOK

B. KOM

C. MQK

D. LMQ

Answer: D



Watch Video Solution

311. A series is given with one term missing. Select the correct alternative from the given ones that will complete the series.

AFG, EJK, INO, ?

A. PQN

B. NOP

C. SMR

D. MRS

Answer: D



Watch Video Solution

312. A series is given with one term missing. Select the correct alternative from the given ones that will complete the series :

BRV, FVZ, JZD, ?

A. MHN

B. MDN

C. NDH

D. HDM

Answer: C



Watch Video Solution

313. A series is given with one term missing. Select the correct alternative from the given ones that will complete the series :

AF, CH, EJ, GL, ?

A. IL

B. LO

C. IN

D. VE

Answer: C



Watch Video Solution

[Watch Video Solution](#)

314. A series is given with one term missing. Select the correct alternative from the given ones that will complete the series :

FH, LN, RT, ?

A. XY

B. XZ

C. ZX

D. WY

Answer: B

[Watch Video Solution](#)

315. A series is given with one term missing. Select the correct alternative from the given ones that will complete the series :

WXV, TUS, QRP, ?

A. NOM

B. MNO

C. ONM

D. LMO

Answer: A



Watch Video Solution

316. A series is given with one term missing. Select the correct alternative from the given ones that will complete the series :

EG, JL, OQ, ?

A. TV

B. TU

C. VT

D. UT

Answer: A



Watch Video Solution

317. A series is given with one term missing. Select the correct alternative from the given ones that will complete the series .

A, C, F, J, O, ?

A. U

B. V

C. T

D. S

Answer: A



Watch Video Solution

318. A series is given with one term missing. Select the correct alternative from the given ones that will complete the series.

C, EF, HIJ, LMNO. ?

A. NOPQR

B. RSTUP

C. PQRST

D. QRSTU

Answer: D



Watch Video Solution

[Watch Video Solution](#)

319. A series is given with one term missing. Select the correct alternative from the given ones that will complete the series.

BD, CE, DF, EG, ?

A. FG

B. DH

C. FH

D. EH

Answer: C

[Watch Video Solution](#)

320. A series is given with one term missing. Select the correct alternative from the given ones that will complete the series.

AVA, BUC, CTE, ?

A. DVG

B. DSF

C. DSG

D. GSD

Answer: C



Watch Video Solution

321. A series is given with one term missing. Select the correct alter native from the given ones that will complete the series :

ABC, EXG, ITK, ?

A. MPO

B. NOL

C. MPL

D. NQO

Answer: A



Watch Video Solution

322. A series is given with one term missing. Select the correct alter native from the given ones that will complete the series :

AN, ET, IZ, OF, ?

A. AL

B. UL

C. AM

D. UM

Answer: B



Watch Video Solution

323. A series is given with one term missing. Select the correct alternative from the given ones that will complete the series :

ST, TV, VY, ?, CH

A. VC

B. YH

C. YC

D. YZ

Answer: C



Watch Video Solution

324. A series is given with one term missing. Select the correct alternative from the given ones that will complete the series.

I, L, O, R,?

A. S

B. T

C. U

D. V

Answer: C

325. Which of the following terms follows the trend of the given list?

ABABAbab, ABABaba B, ABAbabAB, ABabaBAB, AbabABAB, _____

.

A. aBABABab

B. abaBABAB

C. ABABAbab

D. ABABabaB

Answer: B



Watch Video Solution

326. A series is given with one term missing. Select the correct alternative from the given ones that will complete the series.

COT, DQU, ESV, FUW, ?

A. GWY

B. GVX

C. GWX

D. GUY

Answer: C



Watch Video Solution

327. A series is given with one term missing. Select the correct alternative from the given ones that will complete the series.

GJT, IMR, KPP, MSN, ?

A. PUL

B. OVL

C. OUK

D. PVM

Answer: B



Watch Video Solution

328. Which of the following terms follows the trend of the given list?

abABABAB, ABabABAB, ABABabAB, ABABABab, abABABAB,
_____.

A. ABABADAB

B. abABABAB

C. ABABABAA

D. ABabABAB

Answer: D



Watch Video Solution

329. A series is given with one term missing. Select the correct alternative from the given ones that will complete the series.

HPA, FMZ, DJY, BGX, ?

A. ZDW

B. ZEV

C. YDW

D. YEV

Answer: A



Watch Video Solution

1. Which one set of letter when sequentially placed at the gaps in the given letter series shall complete it?

ZX_TR_NLJ_FD

A. V P H B

B. V R H B

C. U P J B

D. UPJD

Answer: A



Watch Video Solution

2. Which one set of letters when sequentially placed at the gaps in the given letter series shall complete it.

BE-K-Q, BB-EHH-KNNQQ

A. DLEK

B. HNEK

C. DLCJ

D. HNCJ

Answer: B



Watch Video Solution

3. Which one set of letters when sequentially placed at the gaps in the given letter series shall complete it?

- stt - tt- tts -

A. tsst

B. sstt

C. ttst

D. tsts

Answer: A



Watch Video Solution

4. Which one set of letters when sequentially placed at the gaps in the given letter series shall complete it.

ac -ga-eg-ce-

A. dbag

B. ecag

C. deag

D. ebdg

Answer: B



Watch Video Solution

5. Which one set of letters when sequentially placed at the gaps in the given letter series shall complete it.

cc – ccbc - accbcc - c-b

A. acac

B. abac

C. abab

D. aabc

Answer: A



Watch Video Solution

6. Which one set of letters when sequentially placed at the gaps in the given letter series shall complete it.

H- JH - IJHHI - HH -JH

A. IHJI

B. HIHI

C. IHJI

D. HJHJ

Answer: A

7. In each of the following questions , a letter series is given .
Some of the letters of the series are missing . These missing
letters are given in the same order as one of the four
alternatives below the series . Find out the correct alternatives

ZYX _ W _ YZZ _ XWWXY _

A. WXYZ

B. WYXZ

C. WXZY

D. XYZW

Answer: A



Watch Video Solution

8. Which one set of letters when sequentially placed at the gaps in the given letter series shall complete it.

a-ba-bb-ab-a

A. aabb

B. baaa

C. abab

D. baab

Answer: D



Watch Video Solution

9. Which one set of letters when sequentially placed at the gaps in the given letter series shall complete it.

a-n-b - -ncb - - ncb

A. bcabab

B. bacbab

C. abcbcb

D. abbbcc

Answer: A



Watch Video Solution

10. Which one set of letters when sequentially placed at the gaps in the given letter series shall complete it.

_aa_ba_bb_ab_aab

A. babab

B. aaabb

C. bbaab

D. bbbaa

Answer: C



Watch Video Solution

11. Which one set of letters when sequentially placed at the gaps in the given letter series shall complete it.

m-nm-n-an-a-ma-

A. amammn

B. aammnn

C. ammanm

D. aamnan

Answer: B



Watch Video Solution



[Watch Video Solution](#)

12. Which one set of letters when sequentially placed at the gaps in the given letter series shall complete it.

- bbm-amb-m-a-bb

A. mbabm

B. abmab

C. mabam

D. ambbm

Answer: C



[Watch Video Solution](#)

13. Which one set of letters when sequentially placed at the gaps in the given letter series shall complete it.

l-n-mllm-n-l

A. m n m n

B. m n n m

C. m n m m

D. n m m n

Answer: B



Watch Video Solution

14. Which one set of letters when sequentially placed at the gaps in the given letter series shall complete it.

__a a b_a_a_ba

A. bbaab

B. aaabb

C. ababa

D. babab

Answer: C



Watch Video Solution

15. Which one set of letters when sequentially placed at the gaps in the given letter series shall complete it.

- n m m n-m m n n-m n n m-

A. n n m m

B. n m n m

C. m n n m

D. n m m n

Answer: A



Watch Video Solution

16. Which one set of letters when sequentially placed at the gaps in the given letter series shall complete it.

-op - mo - n - - p n m o p -

A. mnompn

B. mnpomn

C. mpnmop

D. mnpmon

Answer: D



Watch Video Solution

[Watch Video Solution](#)

17. Which one set of letters when sequentially placed at the gaps in the given letter series shall complete it.

a b - - b a a - - a b -

A. b a a b b

B. a a b a a

C. a a b a b

D. a a a a a

Answer: C

[Watch Video Solution](#)

18. Which one set of letters when sequentially placed at the gaps in the given letter series shall complete it.

ab - aa-aaa-a-ab-a

A. a b b a b

B. a b a a a

C. a a b b a

D. a b b a a

Answer: D



Watch Video Solution

19. Which one set of letters when sequentially placed at the gaps in the given letter series shall complete it.

ab-bc-aab-aa-abba-

A. cabaa

B. bacba

C. bbaaa

D. aabba

Answer: A



Watch Video Solution

20. Which one set of letters when sequentially placed at the gaps in the given letter series shall complete it.

nc-dcn-cddc-n-ddcnn-d

A. cdndc

B. dnncc

C. dendd

D. nccdn

Answer: C



Watch Video Solution

21. Which one set of letters when sequentially placed at the gaps in the given letter series shall complete it.

a _ ab_bcbc_caca_

A. ccba

B. acba

C. bccb

D. bcab

Answer: D



Watch Video Solution

22. Which one set of letters when sequentially placed at the gaps in given letter series shall complete it? r_se__os_ro__er__se

A. o r e s o

B. r o r e s

C. o e s r s

D. r o e s o

Answer: A

[!\[\]\(de95854c7ee024cfadc48187bbb781b2_img.jpg\) Watch Video Solution](#)

23. Which one set of letters when sequentially placed at the gaps in the given letter series shall complete it.

aba_baca_ba_bacaabac_aca

A. c a c b

B. c c a b

C. c a b c

D. a b c c

Answer: A



Watch Video Solution

24. Which one set of letters when sequentially placed at the gaps in the given letter series shall complete it.

bcde ebcd debc cdeb

A. dcbe

B. bcde

C. cdbe

D. dbce

Answer: B



Watch Video Solution

25. Which one set of letters when sequentially placed at the gaps in the given letter series shall complete it.

ca - bd _ec_fd _ge ?

A. b, c, d, e

B. b, d, c, e

C. b, c, e, d

D. a, b, c, e

Answer: A



Watch Video Solution

26. Which one set of letters when sequentially placed at the gaps in the given letter series shall complete it.

a c b - c e -f-

A. dde

B. cde

C. dee

D. ddg

Answer: A



Watch Video Solution

27. Which one set of letters when sequentially placed at the gaps in the given letter series shall complete it.

-wi - - w - nt - in - wi -

A. nttwiwn

B. ttinwin

C. tntiwtn.

D. tntwitn

Answer: C



Watch Video Solution

28. Which one set of letters when sequentially placed at the gaps in the given letter series shall complete it.

QST_,QS _ R,Q _TR, __STR.

A. STR

B. RTSQ

C. TROSS

D. TSRO

Answer: B



Watch Video Solution

29. Which one set of letters when sequentially placed at the gaps in the given letter series shall complete it ?

a_b_a__n_bb_abbn

A. abnabb

B. bnbban

C. bnbbna

D. babban

Answer: B



Watch Video Solution

30. Which one set of letters when sequentially placed at the gaps in the given letter series shall complete it.

_a_aaaba__ba_ab_

A. abaaaa

B. abaaba

C. aababa

D. ababaa

Answer: A



Watch Video Solution

[Watch Video Solution](#)

31. Which one set of letters when sequentially placed at the gaps in the given letter series shall complete it.

h _ eg _ fegh _ eghfe _

A. gffh

B. hhgg

C. ffgh

D. fhfg

Answer: D

[Watch Video Solution](#)

32. Which one set of letters when sequentially placed at the gaps in the given letter series shall complete it.

ac _bd_ ce _df_ egh

A. d, f, g, e

B. b, d, c, a

C. d, g, f, e

D. d, e, f, g

Answer: D



Watch Video Solution

33. Which one set of letters when sequentially placed at the gaps in the given letter series shall complete it.

a e b d _ f j g i _ k o l n _

A. c m h

B. c h m

C. c g m

D. c j l

Answer: B



Watch Video Solution

34. Which one set of letters when sequentially placed at the gaps in the given letter series shall complete it?

ac__cab_baca_aba__aca__

A. acbcc

B. aacbc

C. babbb

D. bebba

Answer: B



Watch Video Solution

35. Which one set of letters when sequentially placed at the gaps in the given letter series shall complete it.

_ab_b_aba __abab

A. a bb aa

B. bb aa b

C. ab aa b

D. a aa ba

Answer: D



Watch Video Solution

[Watch Video Solution](#)

36. Which one set of letters when sequentially placed at the gaps in the given letter series shall complete it.

_cb_cab_baca_cba_ab

A. cabcb

B. abccb

C. bacbc

D. bcaba

Answer: C

[Watch Video Solution](#)

37. Which one set of letters when sequentially placed at the gaps in the given letter series shall complete it.

an_nn_ana_na_nan__a

A. annan

B. aanan

C. nanna

D. naana

Answer: B



Watch Video Solution

38. Which one set of letters when sequentially placed at the gaps in the given letter series shall complete it.

_b_baaabb_a__bb_a_

A. abbaaba

B. ababbaa

C. babaaba

D. baabaab

Answer: A



Watch Video Solution

39. Which one set of letters when sequentially placed at the gaps in the given letter series shall complete it.

a-ba-bb-ab-a

A. aaba

B. baab

C. baaa

D. abab

Answer: B



Watch Video Solution

40. Which one set of letters when sequentially placed at the gaps in the given letter series shall complete it.

r _ sr — tsrrt _ rr – sr

A. ttss

B. tsts

C. trst

D. sett

Answer: C



Watch Video Solution



Watch Video Solution

41. Which one set of letters when sequentially placed at the gaps in the given letter series shall complete it.

m-ommn-m-nommmn-m.

A. onmo

B. nomo

C. monm

D. nnmo

Answer: B



Watch Video Solution

42. Which one set of letters when sequentially placed at the gaps in the given letter series shall complete it.

-PSRQ SRQP-RQPS-

A. PRQS

B. PQRS

C. QPSR

D. SRQP

Answer: C



Watch Video Solution

43. Which one set of letters when sequentially placed at the gaps in the given letter series shall complete it.

a-baa-aaba-ca-b

A. bcca

B. ccaa

C. acaa

D. abac

Answer: C



Watch Video Solution

44. Which one set of letters when sequentially placed at the gaps in the given letter series shall complete it.

ORU-O-UXOR-X-RUX

A. ORXU

B. XURO

C. XRUO

D. OURX

Answer: C



Watch Video Solution

45. Which one set of letters when sequentially placed at the gaps in the given letter series shall complete it.

-ONP, M- NP, MO - P, MON-

A. PNOM

B. NMPO

C. ONPM

D. MONP

Answer: D



Watch Video Solution

[Watch Video Solution](#)

46. Which one set of letters when sequentially placed at the gaps in the given letter series shall complete it.

ab-abc-bc-bca-c

A. caab

B. caac

C. bccb

D. baca

Answer: A

[Watch Video Solution](#)

47. Which one set of letters when sequentially placed at the gaps in the given letter series shall complete it.

aa-b-abc-ac-a-de

A. babcc

B. aaada

C. abade

D. abaad

Answer: B



Watch Video Solution

48. Which one set of letters when sequentially placed at the gaps in the given letter series shall complete it.

-abb, aa-c, - ad - aae-

A. acade

B. acede

C. bebde

D. babce

Answer: A



Watch Video Solution

49. Which one set of letters when sequentially placed at the gaps in the given letter series shall complete it.

bab - b - b - - abb

A. a b b a

B. b b b a

C. a b a b

D. b a b b

Answer: D



Watch Video Solution

50. Which one set of letters when sequentially placed at the gaps in the given letter series shall complete it.

w _ uww _ _ w - xuw _ x _ w

A. xuwuwx

B. xwuuxw

C. xxuwwu

D. xxwwuu

Answer: C



Watch Video Solution



[Watch Video Solution](#)

51. Which one set of letters when sequentially placed at the gaps in the given letter series shall complete it.

-tu-rt-s--us rtu-

A. rsurts

B. rsurtr

C. rsut

D. rtusru

Answer: A



[Watch Video Solution](#)

52. Which one set of letters when sequentially placed at the gaps in the given letter series shall complete it.

cab-c-bdca-d-abd

A. d, a, b, c

B. c, c, a, a

C. b, c, d, a

D. a, b, c, d

Answer: A



Watch Video Solution

53. Which one set of letters when sequentially placed at the gaps in the given letter series shall complete it.

m_pl_pp lmp_l m pp_

A. p m pl

B. l m pl

C. p mm l

D. l mm l

Answer: A



Watch Video Solution

54. Which one set of letters when sequentially placed at the gaps in the given letter series shall complete it.

aac - bba - cc - baa - cb -

A. bacbc

B. abaac

C. cabcb

D. bcacb

Answer: C



Watch Video Solution

55. Which one set of letters when sequentially placed at the gaps in the given letter series shall complete it.

w__xw__x__ax_a_wa_

A. axawxa

B. aawaxx

C. aawwxx

D. waawxx

Answer: C



Watch Video Solution

[Watch Video Solution](#)

56. Which one set of letters when sequentially placed at the gaps in the given letter series shall complete it.

a _ aa bb _ ab _ b _.

A. b a a a a

B. b a b a b

C. b a a b a

D. b b a a a

Answer: C

[Watch Video Solution](#)

57. Which one set of letters when sequentially placed at the gaps in the given letter series shall complete it.

a _ b _ b a _ b _ _ ba

A. b b a a b

B. b b a b b

C. a a b a b

D. a a b b a

Answer: B



Watch Video Solution

58. Which one set of letters when sequentially placed at the gaps in the given letter series shall complete it.

a _ b _ abb _ ab _ a _ bba

A. bbaab

B. babba

C. baaba

D. aabba

Answer: C



Watch Video Solution

59. Which one set of letters when sequentially placed at the gaps in the given letter series shall complete it.

bca_b_aabc_a_caa

A. c b a b

B. b c e c

C. a c a b

D. b c b b

Answer: C



Watch Video Solution

60. Which one set of letters when sequentially placed at the gaps in the given letter series shall complete it.

c-bba - cab - ac - ab - ac

A. babcc

B. bcacb

C. acbcb

D. abcbc

Answer: C



Watch Video Solution

[Watch Video Solution](#)

61. Which one set of letters when sequentially placed at the gaps in the given letter series shall complete it.

a- yz - xy - ax - zax-z

A. xayzy

B. xayyz

C. xazyy

D. axzyy

Answer: C

[Watch Video Solution](#)

62. Which one set of letters when sequentially placed at the gaps in the given letter series shall complete it.

d_n _ _ _nndm_n

A. ndmnm

B. mdnmn

C. mndmn

D. dmnnm

Answer: C



Watch Video Solution

63. Which one set of letters when sequentially placed at the gaps in the given letter series shall complete it.

L_NOO_ML_MNO_NML

A. MNLO

B. ONML

C. NLMO

D. LOMN

Answer: A



Watch Video Solution

64. Which one set of letters when sequentially placed at the gaps in the given letter series shall complete it.

KLM_, KL_N, K_MN, _LMN

A. NMLK

B. KLMN

C. LKNM

D. KLNM

Answer: A



Watch Video Solution

65. Which one set of letters when sequentially placed at the gaps in the given letter series shall complete it.

_XX_Y_XYYX_Y.

A. YYXY

B. YXYX

C. XYYX

D. YYXX

Answer: D



Watch Video Solution

[Watch Video Solution](#)

66. Which one set of letters when sequentially placed at the gaps in the given letter series shall complete it.

a _ cdd _ bcd _ abc _ dab _

A. b a d d c

B. a b d d e

C. b a d c d

D. b d a d c

Answer: A

[Watch Video Solution](#)

67. Which one set of letters when sequentially placed at the gaps in the given letter series shall complete it.

_b b _ c _ b g _ b _ g

A. c b g b c

B. c g b c b

C. c g b c c

D. g b c b b

Answer: B



Watch Video Solution

68. Which one set of letters when sequentially placed at the gaps in the given letter series shall complete it.

a _ bcaa _ caa _ _

A. a b c c

B. a b a c

C. a a b c

D. a b b c

Answer: C



Watch Video Solution

69. Which one set of letters when sequentially placed at the gaps in the given letter series shall complete it.

a-ba-bb-ab-a

A. b a a b

B. a a b a

C. a b a b

D. b a a a

Answer: A



Watch Video Solution

70. Which one set of letters when sequentially placed at the gaps in the given letter series shall complete it.

__dan__nda_dand_

A. dnadna

B. ndanda

C. andana

D. danndn

Answer: C



Watch Video Solution



Watch Video Solution

71. Which one set of letters when sequentially placed at the gaps in the given letter series shall complete it.

b_y__ by _ b_yt

A. bgtbt

B. btbtb

C. atbbt

D. cbbte

Answer: B



Watch Video Solution

72. Which one set of letters when sequentially placed at the gaps in the given letter series shall complete it.

m_nm_n_an_a_ma_

A. a m a m m n

B. a a m n a n

C. a m m a n m

D. a a m m n n

Answer: D



Watch Video Solution

73. Which one set of letters when sequentially placed at the gaps in the given letter series shall complete it.

ww_x_x_yyzz_

A. w z x y

B. w x x z

C. w x y z

D. x w z w

Answer: C



Watch Video Solution

74. Which one set of letters when sequentially placed at the gaps in the given letter series shall complete it.

g _ g _ gh _ g _ i

A. h h i i h h

B. j k l j k l

C. h i j k l i

D.h i h i i h

Answer: D



Watch Video Solution

75. Which one set of letters when sequentially placed at the gaps in the given letter series shall complete it.

p _ _ p _ _ p r p _ r

A. a r s t a

B. q q r r q

C. q r q r q

D. q q r q r

Answer: C



Watch Video Solution

[Watch Video Solution](#)

76. Which one set of letters when sequentially placed at the gaps in the given letter series shall complete it.

_acca _ccca- acccc_aaa

A. a c c a

B. c a a a

C. c c a a

D. c a a c

Answer: B

[Watch Video Solution](#)

77. Which one set of letters when sequentially placed at the gaps in the given letter series shall complete it.

b_t_a/_add_d/ba__ad

A. dattac

B. dadtac

C. abdaac

D. adddatd

Answer: D



Watch Video Solution

78. Which one set of letters when sequentially placed at the gaps in the given letter series shall complete it.

_fgg_eg_eeff_ef_gg

A. eefge

B. fegef

C. efeg

D. fgege

Answer: B



Watch Video Solution

79. Which one set of letters when sequentially placed at the gaps in the given letter series shall complete it.

E_GF_E_FGF_E

A. EGFG

B. GFEF

C. FEGG

D. FGEG

Answer: D



Watch Video Solution

80. Which one set of letters when sequentially placed at the gaps in the given letter series shall complete it.

bc c a abc _ ba ab _

A. abcc

B. abac

C. bbaa

D. baba

Answer: C



Watch Video Solution

[Watch Video Solution](#)

81. Which one set of letters when sequentially placed at the gaps in the given letter series shall complete it.

a _ ab _ baa _ bb _ _

A. abab

B. aabb

C. bbaa

D. baba

Answer: A

[Watch Video Solution](#)

82. Which one set of letters when sequentially placed at the gaps in the given letter series shall complete it.

m _ l m _ l _ m m _ l

A. m l l m l

B. m l m l l

C. l l m l m

D. m m l m l

Answer: B



Watch Video Solution

83. Which one set of letters when sequentially placed at the gaps in the given letter series shall complete it.

a _ b _ c _ a _ b c _ b _ c b

A. ccbcca

B. ccaccb

C. cacabc

D. acbcab

Answer: A



Watch Video Solution

84. Which one set of letters when sequentially placed at the gaps in the given letter series shall complete it.

a_bba_bba_bb

A. aab

B. abb

C. bbb

D. bba

Answer: C



Watch Video Solution

85. Which one set of letters when sequentially placed at the gaps in the given letter series shall complete it.

ab- babc _ab_b_bcb_b

A. c b c a a

B. c a b a c

C. a b c b a

D. a c a c a

Answer: A



Watch Video Solution

[Watch Video Solution](#)

86. Which one set of letters when sequentially placed at the gaps in the given letter series shall complete it ?

B_f _ _ _ dfg _

A. dgggb

B. dggbg

C. bgdgg

D. gdggb

Answer: B

[Watch Video Solution](#)

87. In question, which one set of letters when sequentially placed at the gaps in the given letter series shall complete it ?

_ aabab _ ab _ ab _ bba

A. bbaa

B. baaa

C. abaa

D. abba

Answer: A



Watch Video Solution

88. In question, which one set of letters when sequentially placed at the gaps in the given letter series shall complete it ?

aa _ baa _ aaa _ ba _ ba

A. bbba

B. abab

C. abaa

D. babb



Watch Video Solution

89. Which one set of letters when sequentially placed at the gaps in the given letter series shall complete it.

a _ _ babba _ bb a _ ba

A. abab

B. abba

C. aabb

D. aaab

Answer: A



Watch Video Solution

90. Which one set of letters when sequentially placed at the gaps in the given letter series shall complete it.

AZB _, AZ _Y, A __BY, _ ZBY

A. YBZA

B. BYAZ

C. BZYA

D. AZBY

Answer: A



Watch Video Solution

[Watch Video Solution](#)

91. Which one set of letters when sequentially placed at the gaps in the given letter series shall complete it.

_bcab_cabc_abca_b

A. abac

B. abca

C. aabc

D. bbca

Answer: B

[Watch Video Solution](#)

92. Which one set of letters when sequentially placed at the gaps in the given letter series shall complete it.

b_ab_b_aab_b

A. aabb

B. abbb

C. abba

D. baaa

Answer: B



Watch Video Solution

93. Which one set of letters when sequentially placed at the gaps in the given letter series shall complete it.

- ab_a_bba_bb_a_b

A. abbbab

B. babbba

C. bbaabb

D. abaaab

Answer: D



Watch Video Solution

94. Which one set of letters when sequentially placed at the gaps in the given letter series shall complete it.

r _StUr _S _Urr_tUrrS _U

A. rStUU

B. rrStS

C. rrtSt

D. SSttU

Answer: C



Watch Video Solution

95. Which one set of letters when sequentially placed at the gaps in the given letter series shall complete it.

r t x _ s x _ z _ t x y _ _ y z

A. y y r x s

B. y y s x r

C. y y r s x

D. y y x r s

Answer: C



Watch Video Solution



Watch Video Solution

96. Which one set of letters when sequentially placed at the gaps in the given letter series shall complete it?

ab_d_aaba_na_badna_badna

A. babda

B. andaa

C. badna

D. dbanb

Answer: B



Watch Video Solution

97. Which one set of letters when sequentially placed at the gaps in the given letter series shall complete it?

a _ ca _ c _ ccaa _

A. caca

B. cacc

C. caac

D. ccca

Answer: B



Watch Video Solution

98. Which one set of letters when sequentially placed at the gaps in the given letter series shall complete it?

a _ c _ baab _ cb _

A. abbc

B. abab

C. aabb

D. bcca

Answer: D



Watch Video Solution

99. Which one set of letters when sequentially placed at the gaps in the given letter series shall complete it ?

R _ S _ PM _ KSB _ MRK _

A. KRKSP

B. KBRPS

C. RKSPM

D. BPSMP

Answer: B



Watch Video Solution

100. the following questions, which one set of letters when sequentially placed at the gaps in the given letter series shall complete it ?

gfe_ig_eii__fei_gf_ii

A. eifgi

B. figie

C. ifgie

D. ifge

Answer: C



Watch Video Solution

101. the following questions, which one set of letters when sequentially placed at the gaps in the given letter series shall complete it ?

aa__a_b_abaa_

A. abab

B. baab

C. baba

D. abba

Answer: B



Watch Video Solution

102. Which one set of letters when sequentially placed at the gaps in the given letter series shall complete it?

_cb_ca_ bacb_ca_ bac_d

A. b a d d d b

B. b b b d d d

C. a d d d d b

D. a d d b b b

Answer: C



Watch Video Solution

103. The following questions, which one set of letters when sequentially placed at the gaps in the given letter series shall

complete it.

m_m_am_a_

A. amam

B. ammm

C. amaa

D. mama

Answer: B



Watch Video Solution

104. The following questions, which one set of letters when sequentially placed at the gaps in the given letter series shall complete it.

a _ba_b_b_a_b

A. abaab

B. aabba

C. bbabb

D. abbab

Answer: C



Watch Video Solution

105. Which one set of letters when sequentially placed at the gaps in the given letter series shall complete it?

_ab_b_bc_ ca_

A. accbb

B. abcca

C. cacab

D. abacb

Answer: C



Watch Video Solution

106. Which one set of letters when sequentially placed at the gaps in the given letter series shall complete it ?

ac_c_cb_acbcacbca_bc

A. abbb

B. bacc

C. babc

D. bbcc

Answer: B



Watch Video Solution

[Watch Video Solution](#)

107. Which one set letters when sequentially placed at the gaps in the given letter series shall complete it?

M __ OMMN _ M _ NOMMN _ M

A. ONMO

B. NOMO

C. MONM

D. NNMO

Answer: B

[Watch Video Solution](#)

108. Which one set of letters when sequentially placed at the gaps in the given letter series shall complete it ?

ab_aabb__bb__

A. abbb

B. abab

C. baba

D. baaa

Answer: D



Watch Video Solution

109. The following questions, which one set of letters when sequentially placed at the gaps in the given letters series shall

complete it?

B_CCABB _ CABBC _AB_CCA

A. BCBC

B. BBBC

C. BCCB

D. BBCC

Answer: C



Watch Video Solution

110. The following questions, which one set of letters when sequentially placed at the gaps in the given letters series shall complete it?

LU_TUPLUBTU _ L UBT_P_UBTUP

A. BPUL

B. BUPL

C. LBPU

D. PBUL

Answer: A



Watch Video Solution

111. which one set of letters when sequentially placed at the gaps in the given letter series shall complete it?

b_cd_d_bcc_cdb_

A. dbbbc

B. bddcb

C. dccbd

D. bcccb

Answer: B



Watch Video Solution

112. which one set of letters when sequentially placed at the gaps in the given letter series shall complete it?

ab _dda_ccd_bb_d_

A. ccaac

B. cbaca

C. cbcba

D. cbbcd

Answer: B



Watch Video Solution

[Watch Video Solution](#)

113. In the following two questions, which one set of letters when sequentially placed at the gaps in the given letter series shall complete it ?

a _dba - bcad __da__cd

A. aabbccdd

B. bccdbcab

C. abcddcba

D. cbcddcba

Answer: B

[Watch Video Solution](#)

114. In the following two questions, which one set of letters when sequentially placed at the gaps in the given letter series shall complete it ?

ccbab_caa _ bccc_a _

A. babc

B. babb

C. bbba

D. baab

Answer: B



Watch Video Solution

115. The following questions, which one set of letters when sequentially placed at the gaps in the given letter series shall

complete it.

adb _ ac _ da _ cddcb _ dbc _ cbda

A. bccba

B. ccbba

C. cbbaa

D. bbcad

Answer: C



Watch Video Solution

116. Which one set of letters when sequentially placed at the gaps in the given letter series shall complete it?

a _ b _ ca _ b _ c _ a _ cc

A. a c b c a b

B. a b a b c a

C. a c a c a b

D. a b a b a c

Answer: C



Watch Video Solution

117. In each of the following questions, which one set of letters when sequentially placed at the gaps in the given letter series shall complete it?

SH _ ELAS _ EELA _ HEE _ A

A. HHSS

B. EEHS

C. EHSL

D. ELHA

Answer: C



Watch Video Solution

118. The following questions, which one set of letters/numbers when sequentially placed at the gaps in the given letter series shall complete it?

__aba__ba_ab

A. abbab

B. baabb

C. abbbb

D. bbaba

Answer: A



Watch Video Solution

119. Which one set of letters when sequentially placed at the gaps in the given letter series shall complete it?
BR_____NB____O____NB (A) OWOW (B) RORO (C) WNWN (D)
OWRW

A. OWOW

B. RORO

C. WNWN

D. OWRW

Answer: D



Watch Video Solution

120. The following questions, which one set of letters when sequentially placed at the gaps in the given letter series shall complete it?

_ zy _ zxy _ yxxz _ zyx _ xy

A. zxyzy

B. xyzzy

C. yxzyz

D. yzxyx

Answer: C



Watch Video Solution

121. The following questions, which one set of letters when sequentially placed at the gaps in the given letter series shall complete it?

b_ac_ cc_cb_ab_ac

A. cbaba

B. bbaac

C. abbbc

D. aabba

Answer: D



Watch Video Solution

122. The following questions, which one set of letters when sequentially placed at the gaps in the given letter series shall

complete it?

__babbba_a__

A. baaab

B. babbb

C. ababb

D. bbaba

Answer: C



Watch Video Solution

123. The following questions, which one set of letters when sequentially placed at the gaps in the given letter series shall complete it?

oopqop_qoo_qo_oqo_pq

A. oppo

B. popo

C. opop

D. poop

Answer: A



Watch Video Solution

124. The following questions, which one set of letters when sequentially placed at the gaps in the given letter series shall complete it?

a_baa_baa_ba

A. bbb

B. bab

C. bba

D. aab

Answer: A



Watch Video Solution

125. Which one set of letters when sequentially placed at the gaps in the given letter series shall complete it?

_bbm_amb_m_a_bbm

A. mbabm

B. amhbm

C. mabam

D. abmab

Answer: A



Watch Video Solution

126. Which one set of letters when sequentially placed at the gaps in the given letter series shall complete it.

bc c a abc _ ba ab _

A. acac

B. abcc

C. acbc

D. abac

Answer: B



Watch Video Solution

127. Which one set of letters when sequentially placed at the gaps in the given letter series shall complete it?

ab_cba_bcc_aabccb_ _bccba

A. abbac

B. ccaab

C. abcab

D. cabaa

Answer: D



Watch Video Solution

128. Which one set of letters when sequentially placed at the gaps in the given letter series shall complete it.

aac - bba - cc - baa - cb -

A. abaac

B. cabcb

C. bcach

D. bacbc

Answer: B



Watch Video Solution

129. In the following questions, which one set of letters when sequentially placed at the gaps in the given letter series shall complete it?

bb_aab_caab_ca_

A. abbc

B. bcab

C. cbba

D. acab

Answer: C



Watch Video Solution

130. In the following questions, which one set of letters when sequentially placed at the gaps in the given letter series shall complete it?

_cdb_ddb_db_c_d

A. bbbcc

B. ccebc

C. bbcbb

D. ccbcc

Answer: B



Watch Video Solution

131. Which one set of letters when sequentially placed at the gaps in the given letter series shall complete it?

h _ t _ l _ t t _ l h t _ m _ h t t _ l

A. h m m t t l m

B. t m h m t l m

C. l m t m h m t

D. m m h t l t m

Answer: B



Watch Video Solution

132. In the following question, a series is given with one or more number(s)/alphabet missing. Choose the correct alternative from the given options.

POR_, PO_S, P_RS, _ORS

A. SROP

B. SORP

C. SRPQ

D. RSPO

Answer: A



Watch Video Solution

133. Which one set of letters when sequentially placed at the gaps in the given letter series shall complete it?

s-nx - mnx - mn - sm - x

A. mssxn

B. nxyms

C. nmxxn

D. smnxx

Answer: A



Watch Video Solution

134. In the following question, a series is given with one or more alphabet missing. Choose the correct alternative from the given options.

X_ZY_X_YZY_X

A. XZYX

B. ZYXY

C. YZXZ

D. YYZZ

Answer: C



Watch Video Solution

135. In the following questions, a series is given with one or more alphabet missing. Choose the correct alternative from the given options.

pp _ _ qp _ pqq _ pqq _ _ qq _ q

A. q q p q p q p

B. p p p p q p q

C. q q p q q p

D. q q q p p p q

Answer: A



Watch Video Solution

136. Which one set of letters when sequentially placed at the gaps in the given letter series shall complete it?

a _ c a _ d e _ d _ a d _ _

A. ddacdc

B. daadca

C. dadaac

D. ddaacc

Answer: D



Watch Video Solution



[Watch Video Solution](#)

137. Which one set of letters when sequetially placed at the gaps in the give letter series shall complete it?

_sr_tr_srs_r_srst_

A. ttssrr

B. tsrtsr

C. strtrs

D. tstttr

Answer: D



[Watch Video Solution](#)

138. Which one set of letters when sequentially placed at the gaps in the given letter series shall complete it.

H- JH - IJHHI - HH -JH

A. I H J I

B. H I H I

C. I H I J

D. H Y H J

Answer: A



Watch Video Solution

139. Which one set of letters when sequentially placed at the gaps in the given letter series shall complete it?

xy_kx_zk_yzkxyz_

A. zyxx

B. zyxx

C. zxyk

D. zxyk

Answer: A



Watch Video Solution

140. Which one set of letters when sequentially placed at the gaps in the given letter series shall complete it ? G f e _ i g _ e l _ f e l _ g f _ l l

अक्षरों का कौन-सा समूह खाली स्थानों पर क्रमवार रखने से दी गई अक्षर श्रृंखला को पूरा करेगा?

g f e _ i g _ e l l _ f e l _ g f _ l l

A. ifgie

B. figie

C. eifgi

D. fige

Answer: A



Watch Video Solution

141. In the following question, which one set of letters when sequentially placed at the gaps in the given letter series shall complete it?

JK_MJ_LM_KL_

A. JKLL

B. LKKM

C. LKJM

D. KJLM

Answer: C



Watch Video Solution

142. Which set of letters when sequentially placed at the gaps in the given letter series shall complete it?

CD_E_DD_CD_E

A. CDCD

B. DCCC

C. DCED

D. DDDC

Answer: C



Watch Video Solution

143. In the following question, which one set of letters when sequentially placed at the gaps in the given letter series shall complete it?

MN_O,_NN_,M_NO

A. NMMN

B. NMON

C. MNOO

D. NMMM

Answer: B



Watch Video Solution

144. Which set of letters when sequentially placed at the gaps in the given letter series shall complete it?

r_p_q_rq_p_r

A. qrprp

B. pqrqp

C. qprpq

D. qprpp

Answer: C



Watch Video Solution

145. Which set of letters when sequentially placed at the gaps in the given letter series shall complete it?

cc_b_c_ba_ab

A. ccac

B. cbaa

C. aabb

D. cdab

Answer: A



View Text Solution

146. Which set of letters when sequentially placed at the gaps in the given letter series shall complete it?

CD_E_DD_CD_E

A. CDCD

B. DCCC

C. DCED

D. DDDC

Answer: C



Watch Video Solution

147. In the following question, which one set of letters when sequentially placed at the gaps in the given letter series shall complete it?

P _ P _ RPQ _ S _ Q _ ST

A. QROPR

B. QORPR

C. PQPRR

D. PRQRQ

Answer: B



Watch Video Solution

148. Which set of letters when sequentially placed at the gaps in the given letter series shall complete it?

a _ b _ cc _ a _ b _ c

A. ababc

B. aacbb

C. abcab

D. abbcc

Answer: A



Watch Video Solution

149. In the following question, which one set of letters when sequentially placed at the gaps in the given letter series shall complete it?

X_Z,X_YY_Z,X_Z

A. XXYY

B. YXZY

C. YYXY

D. XXXY

Answer: B



Watch Video Solution

150. In the following question, which one set of letters when sequentially placed at the gaps in the given letter series shall

complete it?

a_d_bd_ab_dd

A. badd

B. ddba

C. bcda

D. dbac

Answer: A



Watch Video Solution

151. In the following question, which one set of letters when sequentially placed at the gaps in the given letter series shall complete it?

KK_LL_K_L_LL

A. LKML

B. LKKK

C. LLKL

D. LKKL

Answer: C



Watch Video Solution

152. In the following question, which one set of letters when sequentially placed at the gaps in the given letter series shall complete it?

p_q_ _qq_p_qr

A. qrppr

B. qrprq

C. arpqr

D. qpprq

Answer: B



Watch Video Solution

153. In the following question, which one set of letters when sequentially placed at the gaps in the given letter series shall complete it?

c_e_cd_f_d_f

A. dfcec

B. dfece

C. cfede

D. cdfed

Answer: B



Watch Video Solution

154. In the following question, which one set of letters when sequentially placed at the gaps in the given letter series shall complete it?

_yzaa _ y_ xy _aazy_

A. xxzzx

B. xxaza

C. xzxzx

D. aazzx

Answer: C



Watch Video Solution

155. In the following question, which one set of letters when sequentially placed at the gaps in the given letter series shall complete it ?

a_bc_a_bcda_bcda__cd

A. acbddb

B. adbcbd

C. cabddc

D. ddcbbc

Answer: B



Watch Video Solution

156. Which one set of letters when sequentially placed at the gaps in the given letter series shall complete it.

L_NOO_ML_MNO_NML

- A. molnon
- B. nolmoo
- C. nomloo
- D. noolmm

Answer: B



Watch Video Solution

157. In the following question, which one set of letters when sequentially placed at the gaps in the given letter series shall

complete it?

efg_ _ eff_ghhe_eff _ gggh_h

A. eghhfe

B. ghhhh

C. hegef

D. hgefhe

Answer: C



Watch Video Solution

158. In the following question, which one set of letters when sequentially placed at the gaps in the given letter series shall complete it?

_ b c a b _ a b c _ b _

A. acac

B. bbca

C. caca

D. aacc

Answer: A



Watch Video Solution

TYPE-IV

1. Find out the odd/wrong number in the given series

62, 46, 34, 24, 16, 10

A. 62

B. 46

C. 34

D. 24

Answer: A



Watch Video Solution

2. Find the wrong number in the following series :

16, 16, 17, 21, 27, 46, 71

A. 27

B. 46

C. 16

D. 71

Answer: A



[Watch Video Solution](#)

3. Find out wrong number from the given series -

5, 27, 61, 122, 213, 340, 509

A. 27

B. 61

C. 122

D. 509

Answer: C



[Watch Video Solution](#)

4. Find out the wrong number in the series.

216, 163, 120, 72, 24

A. 216

B. 163

C. 72

D. 24

Answer: D



Watch Video Solution

5. Select the number which does not belong to the given series :

2, 8, 3, 27, 4, 64, 5, 225

A. 27

B. 8

C. 225

D. 64

Answer: C



Watch Video Solution

6. Find the wrong number in the given series.

13, 24, 29, 39, 44, 54, 61, 69

A. 61

B. 13

C. 44

D. 24

Answer: C



Watch Video Solution

7. Find the wrong number in the given series :

6, 14, 31, 64, 137, 280

A. 31

B. 64

C. 137

D. 280

Answer: B



Watch Video Solution

8. Find the wrong number in the given series.

8, 16, 24, 40, 62, 104, 168

A. 24

B. 40

C. 62

D. 104

Answer: C



Watch Video Solution

9. In each of the following questions one of the terms in the number series is wrong . Find out the wrong term

20, 40, 200, 400, 2000, 4000, 8000

A. 200

B. 2000

C. 8000

D. 4000

Answer: C



Watch Video Solution

10. Find out the wrong number in the sequence 102, 101, 98, 93, 86, 74 ,66, 53

A. 101

B. 66

C. 74

D. 93

Answer: C



Watch Video Solution

11. Which number is wrong in the series ?

5. 11, 23, 47, 96

A. 47

B. 23

C. 96

D. 11

Answer: C



Watch Video Solution

12. Which is the wrong term in the series?

25, 36, 49, 81, 121, 169, 225

A. 36

B. 121

C. 49

D. 81

Answer: A



Watch Video Solution

TYPE-V

1. Number of letters skipped in between adjacent letters goes on increasing successively by one in the series. Identify the set following the above rule.

A. AEIMQU

B. EHKNQT

C. DINSXC

D. FHKQTZ

Answer: D



Watch Video Solution

2. Number of letters skipped in between adjacent letters in the series increases by one. Which of the following series observe the ruling given above?

A. CEHLQW

B. CLOUBK

C. CHMRWB

D. HLPTXN

Answer: A



Watch Video Solution

3. In the following question, numbers of letters skipped in reverse order in between adjacent letters in the series is constant. Which of the following series observe this rule ?

A. SPMJG

B. SGQLJ

C. SPNLJ

D. WUTRQ

Answer: A



Watch Video Solution

4. In question, number of letters skipped in between adjacent letters in the series is increased by one. Which of the following series observes the rule ?

A. ACFJN

B. ACFJO

C. ADFJO

D. ACFKO

Answer: B



Watch Video Solution

5. The letters in BYDWFU have been grouped according to a rule. Which of the following follows this rule?

A. AZCXDV

B. AZCYDW

C. GTIRKP

D. GTIRKL

Answer: C



Watch Video Solution

6. The number of letters skipped in between adjacent letters in the series is decreased by one. Which of the following series observes the rule ?

A. DJOTV

B. DJOSV

C. DJOSW

D. DIOSU

Answer: B



Watch Video Solution

7. In the following question, the number of letters skipped in between adjacent letters in the series is 5. Which of the following series observes this rules?

A. X D I P V

B. X D K P V

C. X D J O U

D. X D J P V

Answer: D



Watch Video Solution

8. The number of letters skipped in between adjacent letters in a series is 5. Which of the following series observes this rule ?

A. CIOUA

B. CINUA

C. CIOTA

D. CIOUZ

Answer: A

[!\[\]\(17acf1afa8cdf0b67c53d4865a5ed469_img.jpg\) Watch Video Solution](#)

9. In the following question, number of letters skipped in between adjacent letters of the series starting from behind

increased by one. Which one of the following observes the rule ?

A. ONLKJ

B. OMJFA

C. OIGDC

D. OMKIG

Answer: B



Watch Video Solution

10. In the following question, increasing number of letters are skipped in between adjacent letters in a series. Which of the following series fulfils this rule ?

A. BGMTA

B. BGMSZ

C. BGMTB

D. BGLRY

Answer: C



Watch Video Solution

11. In the following question, number of letters are skipped in between by a particular rule. Which of the following observes the rule ?

A. ACZXFG

B. CFXURI

C. CFIURX

D. CXFUIR

Answer: D



Watch Video Solution

12. In the following question, number of letters are skipped in between by a particular rule. Which of the following series observes the rule?

A. ABFGJK

B. ACFJOU

C. MPQSTV

D. ADFHJL

Answer: B



Watch Video Solution

13. In the following question, number of letters are skipped in between by a particular rule. Which of the following series observes the rule?

A. AEJOTY

B. AFKPUZ

C. AFKPTY

D. AEINRV

Answer: B



Watch Video Solution

14. In the following question, a letter has been skipped after every letter. Which of the following series observes the rule given above?

A. A B C D E F

B. L M N O P O

C. A C E G I K

D. G H I J K L

Answer: C



Watch Video Solution

15. In the following question the number of letters skipped in between the adjacent letters in the series is constant. Which of the following series observe the given rule?

A. k m p q r

B. h j l m o

C. p r s u w

D. e g i k m

Answer: D



Watch Video Solution

16. The following questions number of letters are skipped in between by a particular rule. Which of the following series observes the rule?

A. ZXTNCD

B. MNXYPO

C. PRTVXZ

D. RSABLM

Answer: C



Watch Video Solution

[Watch Video Solution](#)

17. The following questions number of letters are skipped in between by a particular rule. Which of the following series observes the rule?

A. RTVYZAC

B. KMORTUW

C. SUWYACE

D. OWZDIOV

Answer: C

[Watch Video Solution](#)

18. Number of letters skipped in between adjacent letters in the series increases by one every time. Which of the following series observes this rule?

A. ACFKO

B. DGKPV

C. DBKAM

D. QSVXZ

Answer: B



Watch Video Solution

19. In the following, 5 letters have been skipped between two letters. Which of the following observes the rule given above?

A. RXD

B. ABE

C. PQT

D. LMQ

Answer: A



Watch Video Solution

20. In the following letter series, the number of letters skipped between adjacent letters in the series increases by one. Which of the following series observes the rule?

A. GKMOWYB

B. HJMQVBI

C. HLOSVYA

D. JKVYBMO

Answer: B



Watch Video Solution

21. In the following question, number of letters skipped in between adjacent letters in the series decreases one each time. Which of the following series observes the rule?

A. MSYBG

B. IMTXB

C. BHNSV

D. TZEIL

Answer: D



Watch Video Solution

22. The following series the number of letters skipped in between the adjacent letters in the series is the same. Which of the following series observes the given rule?

A. URNJ

B. ZVRO

C. HDAW

D. CYUQ

Answer: D

23. The following series the number of letters skipped in between the adjacent letters in the series is the same. Which of the following series observes the given rule?

A. TSWVZA

B. TSWVZY

C. HILKON

D. POSRUV

Answer: B



Watch Video Solution

24. In the following question the letter sequence is formed by skipping 3 letters in the backward direction from the starting

letter Which one of the following alternatives has been formed using the above principle?

A. GCYU

B. MQUY

C. VSPM

D. PLIE

Answer: A



Watch Video Solution

25. The number of letters skipped in between two adjacent letters in this series increases by multiples of 2. Which of the following series does not observe the rule given above?

A. ADIPY

B. JMRYG

C. EHMTG

D. HKPWF

Answer: B



Watch Video Solution

26. In the given question the letter sequence is formed by skipping 3 letters in the forward direction. Identify from the following alternatives which one of them cannot be formed using the above principle.

A. GKOS

B. TXBF

C. MPSW

D. AEIM

Answer: C



Watch Video Solution

27. The number of letters skipped between adjacent letters in the series decreases from 5 to 1. Which of the following series does not observe the rule given above?

A. ZTOKHF

B. OIDZWU

C. QKFCYW

D. WQLHEC

Answer: C



Watch Video Solution

28. The number of letters missed is not uniform. Which of the following series observes the above rule?

A. MORTXY

B. PRTVXZ

C. DGJMPS

D. BFJNRV

Answer: A

 Watch Video Solution

29. In one of the series of letters given below adjacent letters are skipped in a decreasing order. Which one of the following

series observes the rule given above?

A. B _ H _ K _ I _ S

B. A _ G _ K _ N _ P

C. N _ P _ H _ J _ C

D. C _ J _ G _ T _ U

Answer: B



Watch Video Solution

30. In the following question number of letters skipped in between adjacent letters in the series is increased by one. Which of the following series observes the rule?

A. B F I L Q

B. E I N T A

C. D H K P V

D. A D H K M

Answer: B



Watch Video Solution

31. The number of letters skipped in between adjacent letters in the series decreases by one each time. Which of the following series observes the rule?

A. CGKOS

B. DHLPT

C. EJNQS

D. BFJNR

Answer: C



Watch Video Solution

32. The number of letters skipped in between adjacent letters in the series is increased by one each time. Which of the following series observes the rule?

A. ADHMS

B. HKOSV

C. GJNSX

D. FLQUX

Answer: A



Watch Video Solution

33. Number of letters skipped in between adjacent letters in the series increases by one. Which of the following series observe the ruling?

A. ACFJNS

B. EGJNSY

C. CEHLPS

D. KNQITW

Answer: B



Watch Video Solution

34. Number of letters skipped in between adjacent letters in the series increases by one. Which of the following series observe the ruling given below?

A. ACFJOU

B. JLNPOQ

C. ZXMKJL

D. KCAOPQ

Answer: A



Watch Video Solution

35. In the following question, the number of letters skipped in between adjacent letters in the series is successive even numbers. Which of the following series observes this rule ?

A. ADGJM

B. BEJQZ

C. BDGKQ

D. FINUZ

Answer: B



Watch Video Solution

36. How many such pairs of letters are there in the word RECOVERED, which have as many letters between them in the word as in the English alphabet ?

A. Three

B. Four

C. Six

D. Five

Answer: B



Watch Video Solution

[Watch Video Solution](#)

37. In the following question number of letters skipped in between adjacent letters in the series increased by one. Which of the following series observe the rule ?

A. KORYBGJ

B. LMEYTPK

C. KMPTYEL

D. KPTYELM

Answer: C

[Watch Video Solution](#)

38. In the following question, number of letters skipped in between adjacent letters is increased by one. Which of the following letter series observes the rule ?

A. KILMOPQ

B. NOPRQST

C. BEINTAI

D. CDEHGF I

Answer: C



Watch Video Solution

39. Number of letters skipped in between adjacent letters in the series increases by one. Which of the following series observes the rule above?

A. CPTOV

B. HJHQV

C. HCFKP

D. IKNRW

Answer: D



Watch Video Solution

40. Number of letters skipped in between adjacent letters in the series increases by one. Which of the following series observes this rule?

A. WBKQXYF

B. WYBFKQX

C. YBQQFHN

D. WZCHJMQ

Answer: B



Watch Video Solution

41. In the following question letters are skipped between by following a particular rule. Which of the following series observes the rule?

A. BDFIJ

B. DGJLM

C. BDHPF

D. ACFHJ

Answer: C



Watch Video Solution

[Watch Video Solution](#)

42. In the following question, number of letters skipped in between adjacent letters of the series starting from behind increased by one. Which one of the following observes the rule ?

- A. ONLKJ
- B. OMJFA
- C. OIGDC
- D. OMKIG

Answer: B

[Watch Video Solution](#)

1. Choose the correct alternative from the given ones that will complete the series.

$$\frac{A}{4}, \frac{D}{9}, \frac{H}{15}, \frac{M}{22}$$

A. $\frac{R}{30}$

B. $\frac{S}{30}$

C. $\frac{Q}{31}$

D. $\frac{Q}{30}$

Answer: B



Watch Video Solution

2. In the following questions, find the missing/numbers/letters/ figure from the given responses.

25- K - 8 , 23 - I - 11 , 21- G - 14 , 19 - E - 17 , ?

A. $17 - F - 19$

B. $19 - C - 17$

C. $17 - C - 20$

D. $20 - D - 17$

Answer: C



Watch Video Solution

3. The following questions, a series is given, with one/two terms(s) missing. Choose the correct alternative from the given ones that will complete the series.

$$\frac{D}{5}, \frac{G}{9}, \frac{J}{14}, \frac{M}{20}$$

A. $\frac{Q}{26}$

B. $\frac{O}{26}$

C. $\frac{Q}{27}$

D. $\frac{P}{27}$

Answer: D



Watch Video Solution

4. The following questions, a series is given, with one/two terms(s) missing. Choose the correct alternative from the given ones that will complete the series.

B2D, E3H, I4M, ?

A. N5R

B. N5T

C. N5S

D. N5Q

Answer: C



Watch Video Solution

5. The following questions, a series is given, with one/two terms(s) missing. Choose the correct alternative from the given ones that will complete the series.

4E, 8I, 13N, 19T, __?

A. 26U

B. 26A

C. 26Z

D. 25Y

Answer: B



Watch Video Solution

6. The following questions, a series is given, with one/two terms(s) missing. Choose the correct alternative from the given ones that will complete the series.

b 3 P, c 6 R, d 12 T, e 24 V, ?

A. f 48 X

B. f 46 X

C. f 48 W

D. g 48 X

Answer: A



Watch Video Solution

7. The following questions, a series is given, with one/two terms(s) missing. Choose the correct alternative from the given ones that will complete the series.

$$\frac{c}{6}, \frac{e}{10}, \frac{g}{14}, \frac{I}{18}$$

A. $\frac{k}{22}$

B. $\frac{k}{11}$

C. $\frac{p}{22}$

D. $\frac{p}{11}$

Answer: A



Watch Video Solution

8. The following questions, a series is given, with one/two terms(s) missing. Choose the correct alternative from the given

ones that will complete the series.

$$\begin{bmatrix} 5 & 9 & ? & = 84 \\ 8 & 6 & 4 & = 56 \\ 7 & 3 & 7 & = 70 \end{bmatrix}$$

A. 4

B. 7

C. 5

D. 6

Answer: D



Watch Video Solution

9. The following questions, a series is given, with one/two terms(s) missing. Choose the correct alternative from the given ones that will complete the series.

4, A, 9, B, 6, C, 11, D, ?,

A. 7

B. 8

C. 14

D. 17

Answer: B



Watch Video Solution

10. the following questions, a series is given, with one/two terms(s) missing. Choose the correct alternative from the given ones that will complete the series.

W-144, ?, S-100, Q-81, O-64

A. V-121

B. U-122

C. V-128

D. U-121

Answer: D



Watch Video Solution

11. In the following series of letters, how many p's are preceded by t and followed by p?

p t p t t p p t p t p p p q q p t p t t p p p t

A. 1

B. 2

C. 3

D. 4

Answer: C



Watch Video Solution

12. In the given series of letters, how many triple p's are there?

ptpttpptptpppqqptpttpppt

A. 1

B. 2

C. 3

D. 4

Answer: B



Watch Video Solution

13. The following questions, a series is given, with one/two terms(s) missing. Choose the correct alternative from the given ones that will complete the series.

1ZA, 3YB, 6XC, 10WD, ?

A. 14VE

B. 15UE

C. 12VE

D. 15VE

Answer: D



Watch Video Solution

14. In the given series of letters, how many t's are preceded and followed by t? PtPtt PPTPTPPPq9PtPtt PPPT

A. 0

B. 2

C. 3

D. 4

Answer: A



Watch Video Solution

15. In the series given below count the number of 9s. each of which is not immediately preceded by 5 but is immediately followed by either 2 or 3. How many such 9s are there?

19 2 6 5 9 3 8 3 9 3 2 5 9 2 9 3 4 8 2 6 9 8

A. 1

B. 5

C. 3

D. 6

Answer: C



Watch Video Solution

16. If the following alphabets are arranged in the reverse order starting with Z and every alternate alphabet is removed from the series, which alphabet will lie in the centre of the resulting series.

A B C D E F G H I J K L M N O P Q R S T U V W X Y Z

A. N

B. N or O

C. M or N

D. M

Answer: A



Watch Video Solution

17. Rule : Every alternate letter of the given group of letters is written in the small form.

Which of the following observe the rule?

A. Tine

B. fOrM

C. boRN

D. eTAL

Answer: B



Watch Video Solution

[Watch Video Solution](#)

18. The given numerals and answer the following questions.

4 5 3 6 4 6 7 3 6 5 4 2 3 4 5 3 6 4 2 3 5 7 8 3 6 7 3 2 1 2 3 5 3 6 5 6 7
3 6 7 3 6 4 1 2 5 4 3 6

How many 3's are followed by '6' but not preceded by '4' ?

A. 8

B. 7

C. 6

D. 5

Answer: B

[Watch Video Solution](#)

19. The given numerals and answer the following questions.

4 5 3 6 4 6 7 3 6 5 4 2 3 4 5 3 6 4 2 3 5 7 8 3 6 7 3 2 1 2 3 5 3 6 5 6 7
3 6 7 3 6 4 1 2 5 4 3 6 How many 2's are preceded by the 4's but
not followed by 5?

A. 6

B. 5

C. 4

D. 2

Answer: D



Watch Video Solution

20. The given numerals and answer the following questions.

4 5 3 6 4 6 7 3 6 5 4 2 3 4 5 3 6 4 2 3 5 7 8 3 6 7 3 2 1 2 3 5 3 6 5 6 7

3 6 7 3 6 4 1 2 5 4 3 6 How many 5's are either followed or preceded by 3?

A. 3

B. 4

C. 5

D. 6

Answer: B



Watch Video Solution

21. The given numerals and answer the following questions.

4 5 3 6 4 6 7 3 6 5 4 2 3 4 5 3 6 4 2 3 5 7 8 3 6 7 3 2 1 2 3 5 3 6 5 6 7

3 6 7 3 6 4 1 2 5 4 3 6 How many 4's are neither followed nor preceded by 6?

A. 3

B. 4

C. 5

D. 6

Answer: C



Watch Video Solution

22. The given numerals and answer the following questions.

4 5 3 6 4 6 7 3 6 5 4 2 3 4 5 3 6 4 2 3 5 7 8 3 6 7 3 2 1 2 3 5 3 6 5 6 7
3 6 7 3 6 4 1 2 5 4 3 6

How many 7's are followed 3 and preceded by 6?

A. 4

B. 5

C. 3

D. 2

Answer: A



Watch Video Solution

23. In the following series of number is, which digit has maximum frequency?

846734378344563464384

A. 8

B. 7

C. 5

D. 4

Answer: D



Watch Video Solution

24. How many 7's are there in the given series which are immediately preceded by 6 but not immediately followed by 8 ?

3 4 8 7 6 1 5 6 7 8 4 9 6 7 5

A. 1

B. 2

C. 3

D. 0

Answer: A



Watch Video Solution

25. In the following series of number is, which digit has maximum frequency?

846734378344563464384

A. 8

B. 6

C. 4

D. 3

Answer: C



Watch Video Solution

26. How many even numbers are there in the following sequence of numbers which are immediately followed by an odd number as well as immediately preceded by an even number ?

8 5 8 6 7 6 8 9 3 2 7 5 3 4 2 2 3 5 5 2 2 8 1 1 9 3 1 7 5 1

- 1) 2
- 2) 3
- 3) 4
- 4) 5
- 5) None of these

- A. One
- B. Three
- C. Four
- D. Five

Answer: C



Watch Video Solution

27. find out missing term

Z3a, W5d, T8g, Q12j,?

A. M16

B. N17m

C. N16k

D. K17n

Answer: B



Watch Video Solution

28. How many '0' are followed by an even number and preceded by an odd number in the following series ?

3 0 2 5 0 3 2 0 3 2 0 2 7 0 4 0 5 8 0 7 0 4 2 0 8

A. 4

B. 3

C. 2

D. 1

Answer: B



Watch Video Solution

29. How many 9 are followed by an even number and preceded by an odd number in the following series?

469259339467924894

A. 4

B. 3

C. 2

D. 1

Answer: C



Watch Video Solution

30. In each of the following questions, a series is given, with one number missing. Choose the correct alternative from the given ones that will complete the series.

$$\begin{bmatrix} 3463 & (2218) & 1245 \\ 5324 & (?) & 3626 \end{bmatrix}$$

A. 1698

B. 1592

C. 2312

D. 1142

Answer: A



Watch Video Solution

31. The following questions, select the missing number from the given responses.

$$\text{If } \begin{bmatrix} 364 & (146) & 437 \\ 574 & (?) & 641 \end{bmatrix}$$

A. 250

B. 134

C. 236

D. 356

Answer: B



Watch Video Solution

32. The following questions, select the missing number from the given responses.

$$\begin{bmatrix} 1 & 8 \\ ? & 27 \end{bmatrix}$$

A. 35

B. 61

C. 41

D. 64

Answer: D



Watch Video Solution

33. The following questions, select the missing number from the given responses.

If $8 - 8 = 16$, $7 - 7 = 14$, $6 - 6 = 12$, what is $5 - 5 = ?$

A. 15

B. 10

C. 12

D. 8

Answer: B



Watch Video Solution

34. If $5 \times 7 = 5$, $12 \times 3 = 6$, $8 \times 9 = 2$

what is the value of $6 \times 8 = ?$

A. 5

B. 6

C. 8

D. 2

Answer: C



Watch Video Solution

35. Choose the correct alternative from the given ones that will complete the series.

$6, 8 :: 2, 12 :: 5, 9 :: 4, ?$

A. 5

B. 8

C. 10

D. 11

Answer: C



Watch Video Solution

36. The following questions, a series is given, with one term missing. Choose the correct alternative from the given ones that will complete the series.

$$\left[\begin{array}{cccc} 2 & 1 & 2 & = 5 \\ 3 & 1 & 1 & = 4 \\ ? & 3 & 1 & = 7 \end{array} \right]$$

A. 0

B. 4

C. 2

D. 1

Answer: B

37. The following data shows the game level and its scores. Find out the score for the 6th level:

Level	→	1	2	3	4	5	6
Scores	→	2	4	8	14	22	?

A. 24

B. 32

C. 44

D. 52

Answer: B



Watch Video Solution

38. $B_2CD, _ _ , BCD_4, B_5CD, BC_6D$

A. B_2CD

B. BCD_2

C. BC_3D

D. BCD_7

Answer: C



Watch Video Solution

39. What is once in PEN, twice in PA PER and thrice in PEPPER?

A. E

B. P

C. R

D. A

Answer: B



Watch Video Solution

40. Number of each letter in the given word are indicated in each alternative Identify the correct one. COMMISSION

A. $C_1O_2, M_2, I_2, S_2, N_1$

B. $C_1O_1, M_2, I_2, S_2, N_1$

C. $C_2O_1, M_2, I_2, S_2, N_1$

D. $C_1O_2, M_2, I_2, S_2, N_2$

Answer: A



Watch Video Solution

41. Number of letters repeated in the given word are indicated in front of each alternative. Identify the correct alternative.

MEASUREMENTS

A. $M_2 E_2 A_2 S_2 U_1 R_1 N_1 T_1$

B. $M_2 E_3 A_2 S_2 U_1 R_1 N_1 T_1$

C. $M_2 E_2 A_1 S_2 U_1 R_1 N_1 T_1$

D. $M_2 E_3 A_1 S_2 U_1 R_1 N_1 T_1$

Answer: D



Watch Video Solution

42. Which letter in the alphabets is as far from B as is from X?

A. K

B. J

C. L

D. M

Answer: B



Watch Video Solution

43. Answer the question on the basis of the list of letters given below.

B C D T K N P O R T U V W T K Z K T L K N N K T F G Z H K T K N G
H J L N K T T

How many T's are followed by K, but not preceded by K?

A. 1

B. 2

C. 3

D. 4

Answer: B



Watch Video Solution

44. Answer the question on the basis of the list of letters given below.

B C D T K N P O R T U V W T K Z K T L K N N K T F G Z H K T K N G
H J L N K T T

How many K's are followed by T but not preceded by N?

A. 1

B. 2

C. 3

D. 4

Answer: B



[Watch Video Solution](#)

45. Answer the question on the basis of the list of letters given below.

B C D T K N P O R T U V W T K Z K T L K N N K T F G Z H K T K N G
H J L N K T T

How many K's are with N before or after?

A. 2

B. 3

C. 4

D. 5

Answer: D



[Watch Video Solution](#)

46. Answer the question on the basis of the list of letters given below.

B C D T K N P O R T U V W T K Z K T L K N N K T F G Z H K T K N G
H J L N K T T

How many T's are not followed or preceded by K?

A. 2

B. 3

C. 5

D. 4

Answer: B



Watch Video Solution

47. Answer the question on the basis of the list of letters given below.

B C D T K N P O R T U V W T K Z K T L K

N N K T F G Z H K T K N G H J L N K T T

How many N's are not followed or preceded by K?

A. 0

B. 2

C. 3

D. 5

Answer: A



Watch Video Solution

48. In the following list of numbers how many 4's are followed by 5 but not preceded by 6?

2 1 4 5 2 1 3 0 7 6 1 9 4 0 3 6 4 5 4 9 5 8 2 5 3 7 6 8 5 4 5 6 7 4

A. 5

B. 6

C. 4

D. 2

Answer: D



Watch Video Solution

49. In the following list of letters how many X's are followed by Y and preceded by W?

A C E G I W X Y K M O Q S U W Y W X Y Z X V T R P N W X Y L F D
W X Y B

A. 4

B. 6

C. 2

D. 5

Answer: A



Watch Video Solution

50. In the following list of letters how many P's are followed by R
and preceded by S?

S J A S P R B K T D U L C S P R D M V C N E S P R F O W B P G S P R
H O X A Z Y R I S P R

A. 4

B. 3

C. 5

D. 6

Answer: C



Watch Video Solution

51. In the following list of numerals, how many 8's are there followed by 6 but not preceded by 2?

6 4 3 2 1 8 2 1 8 6 9 3 4 5 2 8 6 3 8 6 4 9 2 1 6 8 6 4 9 5 4 2 6 4

A. 5

B. 4

C. 3

D. 1

Answer: C



Watch Video Solution

52. How many 4's are there preceded by 7 but not followed by 3?

5 9 3 2 1 7 4 2 6 9 7 4 6 1 3 2 8 7 4 1 3 8 3 2 5 6 7 4 3 9 5 8 2 0 1 8 7
4 6 3

A. 3

B. 5

C. 6

D. 4

Answer: D



Watch Video Solution



[Watch Video Solution](#)

53. How many a's are there followed by r's but not preceded by q's? Imnefd argitmntwraq smstqaritnoar

A. 2

B. 4

C. 3

D. 5

Answer: A



[Watch Video Solution](#)

54. How many K's are there preceded by N but not followed by U ?

A B C D K N L J M N K S T R Z N K U A N K U B W X N K L S

A. 6

B. 2

C. 4

D. 3

Answer: B



Watch Video Solution

55. How many L's are there which do not have R preceding them and also do not have T following them ?

ZQSTLRMNQNRTUVXRLTASLTQRSLT

A. 2

B. 1

C. 3

D. 5

Answer: B



Watch Video Solution

56. Choose the missing term.

P 3 C, R 5 F, T 8 I, V 12 L, ?

A. X17M

B. X17O

C. Y17O

D. X16O

Answer: B



[Watch Video Solution](#)

57. find the missing term

7, 2 = 59, 5, 3 = 28, 9, 1 = 810, 2, 1 = 13, 5, 4 = ?

A. 19

B. 9

C. 20

D. 239

Answer: A



[Watch Video Solution](#)

58. find out the missing term

C2E, E5H, G12K, I27N, ?

A. 158P

B. J58Q

C. K58Q

D. I57Q

Answer: C



Watch Video Solution

59. find out missing term

ZA_5,Y_4 B, XC_6 , W_3,D, ? .

A. VE_7

B. E_7V

C. V_2, E

D. VE_5

Answer: A



Watch Video Solution

60. C-3, E-5, G-7, I-9, ?, ?

A. M - 18, K -14

B. X-24, M-21

C. K - 11, M - 13

D. O - 15, X - 24

Answer: C



Watch Video Solution

61. How many '8' are followed by even number and preceded by an odd number?

184381483287848568784186

A. 3

B. 4

C. 9

D. 5

Answer: B



Watch Video Solution

62. In the following letter series how many Ms are following by N, but not preceded by N?

N M W V M N M V W N M N M M N W V M N

A. 1

B. 2

C. 3

D. 4

Answer: C



Watch Video Solution

63. Each question is based on the following alphabet-series :

How many A's are there in the following series which are immediately followed by B as well as immediately preceded by Z?

AMBZANAABZABAZBAPZB

A. 0

B. 1

C. 2

D. 3

Answer: D



Watch Video Solution

64. In the following series, how many HIG occur in such a way that I is in the middle and 'H' and 'G' are adjacent to it on both sides? GGHIHIIGGJKLMGIHIG

A. 3

B. 2

C. 5

D. 4

Answer: B



Watch Video Solution

65. How many 8's followed by an even number and preceded by an odd number?

7, 8, 5, 6, 7, 8, 4, 3, 2, 1, 3, 8, 6, 4, 3, 7, 8, 4, 2, 1, 3, 8, 2, 8, 9

A. 4

B. 3

C. 2

D. 5

Answer: A



Watch Video Solution

66. Select from the alternatives an appropriate term that is identical to the term given in the question.

A C E G

A. IJLM

B. OQSU

C. BDEF

D. GHJN

Answer: B



Watch Video Solution

67. the following questions, a series is given with one (or more) term missing. Choose the correct alternative from the given

ones that will complete the series.

C4X, F9U, I16R,. ?

A. L25P

B. L25O

C. L27P

D. K25P



Watch Video Solution

68. In the following question, a series is given with one or more number(s)/alphabet missing. Choose the correct alternative from the given options.

J2Z, K4X, L7V, MIIT, ?

A. O17R .

B. NI75

C. R16N

D. NI6R

Answer: D



Watch Video Solution

69. In the following question, a series is given with one or more term missing. Choose the correct alternative from the given options.

az225, cx423, ev621, _?_, ____? ____

A. jq1116, kp1215

B. go1314, mn126

C. gt819, 1r1017

D. gu720, gt819

Answer: C



Watch Video Solution

70. In the following sequence of letters, how many times is the letter 'p' immediately preceded by the letter 't'?

s p r u a t p o g h j t k p s t p d g c l p t t t p p p t p t p t p t s m v
b t p g c x d p t p k l s t p t

A. 6

B. 8

C. 7

D. 9

Answer: D



Watch Video Solution

71. In the following question, a series is given with one or more term missing. Choose the correct alternative from the given options. Cube > Square > ?

A. Line

B. Triangle

C. Rectangle

D. Circle

Answer: A



Watch Video Solution

72. In the following question, a series is given with one or more word missing. Choose the correct alternative from the given options.

Leaves, Twig, Branches, Trunk?

- A. Soil
- B. Roots
- C. Fruits
- D. Grass

Answer: B



Watch Video Solution

73. A series is given with one term missing. Choose the correct alternative from the given ones that will complete the series.

Dadabhai Naoroji, Bal Gangadhar Tilak, Lala Lajpat Rai?

- A. Mahatma Gandhi
- B. Jawaharlal Nehru
- C. Subhash Chandra Bose
- D. Bhagat Singh

Answer: A



Watch Video Solution

74. A series is given with one term missing. Choose the correct alternative from the given ones that will complete the series. ?,
Hexane, Heptane, Octane

- A. Pentane
- B. Benzene

C. Nonane

D. Methane

Answer: A



Watch Video Solution

75. A series is given with one term missing. Choose the correct alternative from the given ones that will complete the series.

Mouth, Esophagus, Stomach, ?

A. Large intestine

B. Small intestine

C. Liver

D. Pancreas

Answer: B



Watch Video Solution

76. A series is given with one term missing. Choose the correct alternative from the given ones that will complete the series.

?, Hexane, Heptane, Octane

A. Pentane

B. Benzene

C. Nonane

D. Methane

Answer: A



Watch Video Solution

77. A series is given with one term missing. Choose the correct alternative from the given ones that will complete the series

?, Planning, Strategy, Marketing, Finance

A. Realization

B. Success

C. Failure

D. Idea

Answer: D



Watch Video Solution

78. A series is given with one term missing. Choose the correct alternative from the given ones that will complete the series :

Jaipur, Rajasthan, India, ?

A. Europe

B. Antarctica

C. Asia

D. Australia

Answer: C



Watch Video Solution

79. A series is given with one term missing. Choose the correct alternative from the given ones that will complete the series.

?, James Garfield, William McKinley, John F Kennedy

A. Franklin Roosevelt

B. George W Bush

C. Abraham Lincoln

D. Bill Clinton

Answer: C



Watch Video Solution

80. A series is given with one term missing. Choose the correct alternative from the given ones that will complete the series.

Leaf, Caterpillar, Frog. ?

A. Grasshopper

B. Snake

C. Cow

D. Deer

Answer: B



Watch Video Solution

[Watch Video Solution](#)

81. A series is given with one term missing. Select the correct alternative from the given ones that will complete the series.

?, Lal Bahadur Shastri, Indira Gandhi, Morarji Desai, Choudhary Charan Singh,

A. Jawahar Lal Nehru

B. Rajiv Gandhi

C. Manmohan Singh

D. V. P. Singh

Answer: A

[Watch Video Solution](#)

82. A series is given with one term missing. Select the correct alternative from the given ones that will complete the series.

Second, Minute, Hour, ?

- A. Days
- B. Night
- C. Year
- D. Month

Answer: A



Watch Video Solution

83. A series is given with one term missing. Choose the correct alternative from the given ones that will complete the series.

Asia, Africa, North America,

A. China

B. Australia

C. Canada

D. Japan

Answer: B



Watch Video Solution

84. A series is given with one term missing. Select the correct alternative from the given ones that will complete the series.

AK12, GV29, LF18, PO?

A. 34

B. 31

C. 42

D. 40

Answer: B



Watch Video Solution

85. A series is given with one word missing choose the correct alternative from the given ones that will complete the series
hello , lower , error ,organ ,tense

A. night

B. rapture

C. senile

D. watch

Answer: C



Watch Video Solution

[Watch Video Solution](#)

86. A series is given, with one word missing. Choose the correct alternative from the given ones that will complete the series:
employ, oyster, error, ornate, tennis, ?

A. neptune

B. nature

C. terminate

D. isomer

Answer: D

[Watch Video Solution](#)

87. A series is given, with one word missing. Choose the correct alternative from the given ones that will complete the series :

Money, Amity, Camera, Animal, Telomere, ?

A. Talisman

B. Litmus

C. Matter

D. Shame

Answer: A



Watch Video Solution

88. A series is given with one term missing. Select the correct alternative from the given ones that will complete the series.

upset, aurora, spurn, strut, status, ?

A. treasure

B. perfect

C. right

D. unique

Answer: A



Watch Video Solution

89. A series is given, with one word missing. Choose the correct alternative from the given ones that will complete the series.

nature, ensure, tense, spent, spurn, ?

A. pushup

B. thrash

C. upturn

D. asset

Answer: C



Watch Video Solution

90. A series is given with one term missing. Select the correct alternative from the given ones that will complete the series :

A7F, E15J, I23N, ?

A. R13M

B. M31R

C. R23M

D. R375

Answer: B



Watch Video Solution



Watch Video Solution