



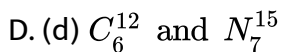
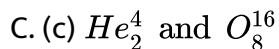
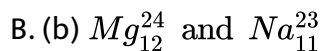
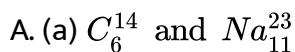
CHEMISTRY

BOOKS - NARENDER AVASTHI CHEMISTRY (ENGLISH)

ATOMIC STRUCTURE

Level 1

1. Which of the following pair is isodiaphers?



Answer: C



Watch Video Solution

2. Which of the following does not characterise X-rays?

- A. (a) The radiation can ionise the gas
- B. (b) It causes fluorescence effect on ZnS
- C. (c) It is deflected by electric and magnetic fields
- D. (d) Its wavelength is shorter than ultraviolet rays

Answer: C



Watch Video Solution

3. The ratio of specific charge of a proton and an alpha-particle is :

- A. (a) 2 : 1
- B. (b) 1 : 2
- C. (c) 1 : 4

D. (d) 1 : 1

Answer: A



Watch Video Solution

4. The increasing order (lowest first) for the values of e/m (charge/mass) for electron (e), proton (p), neutron (n), and alpha particle (α) is

A. (a) e, p, n, α

B. (b) n, p, e, α

C. (c) n, p, α, e

D. (d) n, α, p, e

Answer: D



Watch Video Solution

5. The mass to charge ratio (m/e) for a cation $1.5 \times 10^{-8} \text{ kg/C}$. What is the mass of this cation?

A. (a) $2.4 \times 10^{-19} \text{ g}$

B. (b) $2.4 \times 10^{-27} \text{ g}$

C. (c) $2.4 \times 10^{-24} \text{ g}$

D. (d) None of these

Answer: C



[Watch Video Solution](#)

6. Rutherford's experiment on the scattering of α particle showed for the first time that the atom has

A. (a) electrons

B. (b) protons

C. (c) nucleus

D. (d) neutrons

Answer: C



[Watch Video Solution](#)

7. α -particles are represented by:

A. (a) lithium atoms

B. (b) helium nuclei

C. (c) nuclei

D. (d) None of these

Answer: B



[Watch Video Solution](#)

8. In Bohr's stationary orbits:

- A. (a) electrons do not move
- B. (b) electrons move emitting radiations
- C. (c) energy of the electron remains constant
- D. (d) angular momentum of the electron is $h / 2\pi$

Answer: C

 [Watch Video Solution](#)

9. On the basis of Bohr's model, the radius of the 3rd orbit is :

- A. (a) equal to the radius of first orbit
- B. (b) three times the radius of first orbit
- C. (c) five times the radius of first orbit
- D. (d) nine times the radius of first orbit

Answer: D

 [Watch Video Solution](#)

10. The correct expression derived for the energy of an electron in the n^{th} energy level is for H-atom :

A. (a) $E_n = - \frac{2\pi^2 m e^4 K^2}{n^2 h^2}$

B. (b) $E_n = \frac{\pi^2 m e^4 K^2}{2n^2 h^2}$

C. (c) $E_n = \frac{2\pi^2 m e^2 K^2}{n^2 h^2}$

D. (d) $E_n = \frac{2\pi^2 m e^4 K^2}{n^2 h^2}$

Answer: A



Watch Video Solution

11. Ionization energy for hydrogen atom in ergs, Joules and eV respectively is :

A. 21.8×10^{-12} , 218×10^{-20} , 13.6

B. $13.6 \times 218 \times 10^{-20}$, 21.8×10^{-13}

C. 21.8×10^{-20} , 13.6, 21.8×10^{-13}

D. 21.8×10^{-13} , 13.6, 21.8×10^{-20}

Answer: A

 [Watch Video Solution](#)

12. For any H like system, the ratio of velocities of electron in I, II & III orbit i.e., $V_1 : V_2 : V_3$ will be:

A. (a) 1 : 2 : 3

B. (b) $1 : \frac{1}{2} : \frac{1}{3}$

C. (c) 3 : 2 : 1

D. (d) 1 : 1 : 1

Answer: B

 [Watch Video Solution](#)

13. The volume of nucleus is about :

- A. 10^{-4} times to that of an atom
- B. 10^{-15} times to that of an atom
- C. 10^{-5} times to that of an atom
- D. 10^{-10} times to that of an atom

Answer: B



[Watch Video Solution](#)

14. An electron in an atom jumps in such a way that its kinetic energy changes from x to $\frac{x}{4}$. The change in potential energy will be:

- A. $+\frac{3}{2}x$
- B. $-\frac{3}{8}x$
- C. $+\frac{3}{4}x$
- D. $-\frac{3}{4}x$

Answer: A



[Watch Video Solution](#)

15. The potential energy of an electron in the hydrogen atom is -6.8 eV.

Indicate in which excited state, the electron is present?

A. first

B. second

C. third

D. fourth

Answer: A



[Watch Video Solution](#)

16. What is the potential energy of an electron present in N – shell of the Be^{3+} ion ?

A. -3.4eV

B. -6.8eV

C. -13.6eV

D. -27.2eV

Answer: D

 [Watch Video Solution](#)

17. The kinetic and potential energy (in eV) of electron present in third Bohr's orbit of hydrogen atom are respectively :

A. $-1.51, -3.02$

B. $1.51, -3.02$

C. $-3.02, 1.51$

D. $1.51, -1.51$

Answer: B

 [Watch Video Solution](#)

18. The distance between 4th and 3rd Bohr orbits of He^+ is :

A. $2.645 \times 10^{-10} \text{m}$

B. $1.322 \times 10^{-10} \text{m}$

C. $1.851 \times 10^{-10} \text{m}$

D. None of these

Answer: C

 [Watch Video Solution](#)

19. What atomic number of an element "X" would have to become so that the 4th orbit around X would fit inside the I Bohr orbit of H atom ?

A. 3

B. 4

C. 16

D. 25

Answer: C



[Watch Video Solution](#)

20. The ratio of velocity of the electron in the third and fifth orbit of Li^{2+} would be :

A. 3 : 5

B. 5 : 3

C. 25 : 9

D. 9 : 25

Answer: B



[Watch Video Solution](#)

21. If radius of second stationary orbit (in Bohr's atom) is R then radius of third orbit will be :

A. $R/3$

B. $9R$

C. $R/9$

D. $2.25R$

Answer: D



Watch Video Solution

22. Which state of the triply ionized Beryllium (Be^{3+}) has the same orbit radius as that of the ground state of hydrogen atom?

A. 3

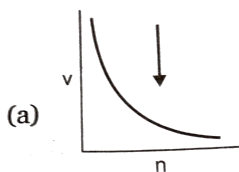
B. 2

C. 4

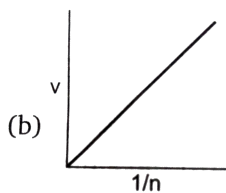
Answer: B **Watch Video Solution**

23. Select the incorrect graph for velocity of e^- in an orbit vs. Z , $\frac{1}{n}$ and n

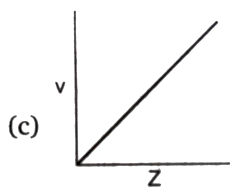
:



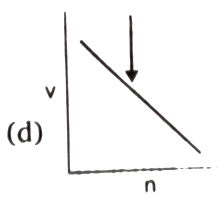
A.



B.



C.



D.

Answer: D

 [Watch Video Solution](#)

24. What is the frequency of revolution of electron present in *2nd* Bohr's orbit of *H* – atom ?

A. $1.016 \times 10^{16} \text{ s}^{-1}$

B. $4.065 \times 10^{16} \text{ s}^{-1}$

C. $1.626 \times 10^{15} \text{ s}^{-1}$

D. $8.2 \times 10^{14} \text{ s}^{-1}$

Answer: D

 [Watch Video Solution](#)

25. According to Bohr's atomic theory, which of the following is correct ?

(a) Potential energy of electron $\propto \frac{Z^2}{n^2}$

(b) The product of velocity of electron and principal quantum number (n)
 $\propto -Z^2$

(c) Frequency for revolution of electron in an orbit $\propto \frac{Z^2}{n^3}$

(d) Coulombic force of attraction on the electron $\propto \frac{Z^2}{n^2}$

A. Potential energy of electron $\propto \frac{Z^2}{n^2}$

B. The product of velocity of electron and principal quantum number
(n) $\propto -Z^2$

C. Frequency fo revolution of electron in an orbit $\propto \frac{Z^2}{n^3}$

D. Coulombic force of attraction on the electron $\propto \frac{Z^2}{n^2}$

Answer: A,C



Watch Video Solution

26. Number of waves produced by an electron in one complete revolution in n^{th} orbit is :

A. n

B. n^2

C. $(n + 1)$

D. $(2n + 1)$

Answer: A



[Watch Video Solution](#)

27. Which of the following statement does not form part of Bohr's model of the hydrogen atom?

A. Energy of the electrons in the orbit is quantized

B. The electron in the orbit which is nearest to the nucleus has the lowest energy

C. Electrons revolve in different orbits around the nucleus

D. The position and velocity of the electrons in the orbit cannot be determined simultaneously

Answer: D



[Watch Video Solution](#)

28. What is the separation energy (in eV) for Be^{3+} in the first excited state ?

A. (a) 13.6 eV

B. (b) 27.2 eV

C. (c) 40.8 eV

D. (d) 54.5 eV

Answer: D



[Watch Video Solution](#)

29. If in Bohr's model, for unielectronic atom, time period of revolution is represented as $T_{n,z}$ where n represents shell no. and Z represents atomic number then the value of $T_{1,2} : T_{2,1}$, will be :

A. 8 : 1

B. 1 : 8

C. 1 : 1

D. 1 : 32

Answer: D



[Watch Video Solution](#)

30. Which of the following is discreted in Bohr's theory?

A. Potential energy

B. Kinetic energy

C. velocity

D. Angular momentum

Answer: D



[Watch Video Solution](#)

31. What is the ratio of time periods (T_1/T_2) in second orbit of hydrogen atom to third orbit of He^+ ion?

A. $8/27$

B. $32/27$

C. $27/32$

D. None of these

Answer: B



[Watch Video Solution](#)

32. The mass of an electron is m , charge is e and it is accelerated from rest through a potential difference of V volts. The velocity acquired by electron will be :

A. $\sqrt{\frac{V}{m}}$

B. $\sqrt{\frac{eV}{m}}$

C. $\sqrt{\frac{2eV}{m}}$

D. zero

Answer: C



Watch Video Solution

33. If the ionization energy of He^+ is $19.6 \times 10^{-18} J$ per atom then the energy of Be^{3+} ion in the second stationary state is :

A. $-4.9 \times 10^{-18} J$

B. $-44.1 \times 10^{-18} J$

C. $-11.025 \times 10^{-18} J$

D. None of these

Answer: D

 [Watch Video Solution](#)

34. The energy of the second Bohr orbit in the hydrogen atom is $-3.41eV$. The energy of the second Bohr orbit of He^+ ion would be :

A. $-0.85 eV$

B. $-13.64 eV$

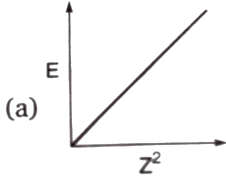
C. $-1.70 eV$

D. $-6.82 eV$

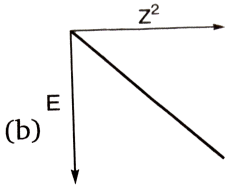
Answer: B

 [Watch Video Solution](#)

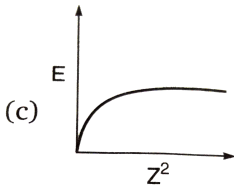
35. The energy of an electron moving in n^{th} Bohr's orbit of an element is given by $E_n = \frac{-13.6}{n^2} Z^2$ eV/atom (Z =atomic number). The graph of E vs. Z^2 (keeping "n" constant) will be :



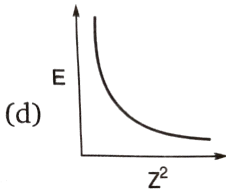
A.



B.



C.



D.

Answer: B



Watch Video Solution

36. If ϵ_0 be the permittivity of vacuum and r be the radius of orbit of H-atom in which electron is revolving, then velocity of electron is given by :

A. $v = \frac{e}{\sqrt{4\pi\epsilon_0 rm}}$

B. $v = e \times \sqrt{4\pi\epsilon_0 rm}$

C. $v = \frac{4\pi\epsilon_0 rm}{e}$

D. $v = \frac{4\pi\epsilon_0 rm}{e^2}$

Answer: A



Watch Video Solution

37. Which of the following statement(s) *is/are* consistent with the Bohr theory of the atom (and no other)?

- (1) An electron can remain in a particular orbit as long as it continuously absorbs radiation of a definite frequency.
- (2) The lowest energy orbits are those closest to the nucleus.

(3) All electrons can jump from the K shell to the M shell by emitting radiation of a definite frequency.

- A. 1,2,3,
- B. 2 only
- C. 3 only
- D. 1,2

Answer: B



[Watch Video Solution](#)

38. The ionization potential for the electron in the ground state of the hydrogen atom is $13.6 \text{ eV atom}^{-1}$. What would be the ionization potential for the electron in the first excited state of Li^+ ?

- A. 3.4 eV
- B. 10.2 eV
- C. 30.6 eV

D. 6.8 eV

Answer: C



Watch Video Solution

39. What is the energy content per photon (J) for light of frequency 4.2×10^{14} Hz?

A. 2.8×10^{-21}

B. 2.5×10^{-19}

C. 2.8×10^{-19}

D. 2.5×10^{-18}

Answer: C



Watch Video Solution

40. Wavelength for high energy EMR transition in H-atom is 91 nm. What energy is needed for this transition?

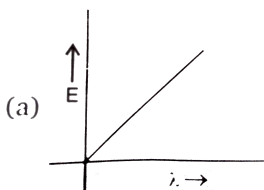
- A. 1.36 eV
- B. 1240 eV
- C. 13 eV
- D. 13.6 eV

Answer: D

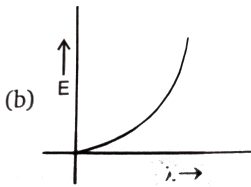


Watch Video Solution

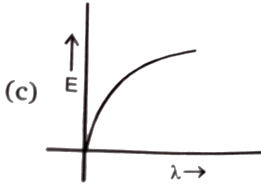
41. Which graph shows how the energy E of a photon of light is related to its wavelengths (λ)?



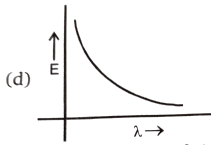
A.



B.



C.



D.

Answer: D

 [Watch Video Solution](#)

42. Assume that 10^{-17} J of light energy is needed by the interior of the human eye to see an object . How many photons of green light ($\lambda = 495 \text{ nm}$) are needed to generate this minimum energy .

$$[h = 6.6 \times 10^{-34} \text{ Js}]$$

A. 25

B. 30

C. 45

D. 60

Answer: A



[Watch Video Solution](#)

43. Line spectra is characteristic of :

A. molecules

B. atoms

C. radicals

D. none of these

Answer: B



[Watch Video Solution](#)

44. The spectrum produced from an element is :

- (a) Atomic Spectrum
- (b) Line Spectrum
- (c) Absorption Spectrum
- (d) Any one of the above

A. (a) atomic spectrum

B. (b) line spectrum

C. (c) absorption spectrum

D. (d) any one of the above

Answer: D



[Watch Video Solution](#)

45. Electronic transition in He^+ ion takes from n_2 to n_1 shell such that

:

$$2n_2 + 3n_1 = 18$$

$$2n_2 - 3n_1 = 6$$

What will be the total number of photons emitted when electrons transit to n_1 shell?

A. 21

B. 15

C. 20

D. 10

Answer: D



[Watch Video Solution](#)

46. Which of the following expressions represents the spectrum of Balmer series (If n is the principal quantum number of higher energy level) in Hydrogen atom ?

$$(a) \bar{\nu} = \frac{R(n-1)(n+1)}{n^2}$$

$$(b) \bar{\nu} = \frac{R(n-2)(n+2)}{4n^2}$$

$$(c) \bar{v} = \frac{R(n-2)(n+2)}{n^2}$$

$$(d) \bar{v} = \frac{R(n-1)(n+1)}{4n^2}$$

$$A. \bar{v} = \frac{R(n-1)(n+1)}{n^2}$$

$$B. \bar{v} = \frac{R(n-2)(n+2)}{4n^2}$$

$$C. \bar{v} = \frac{R(n-2)(n+2)}{n^2}$$

$$D. \bar{v} = \frac{R(n-1)(n+1)}{4n^2}$$

Answer: B



Watch Video Solution

47. Multiple or fine structure of spectral lines is due to :

- (a) presence of main energy levels
- (b) presence of sub-levels
- (c) presence of electronic configuration
- (d) is not a characteristics of the atom

A. presence of main energy levels

- B. presence of sub-levels
- C. presence of electronic configuration
- D. is not a characteristics of the atom

Answer: B

 [Watch Video Solution](#)

48. Whith increasing principal quantum number, the energy difference between adjacent energy levels in H-atom:

- A. decreases
- B. increases
- C. remains constant
- D. decreases for low value of Z and increases for higher value of Z.

Answer: A

 [Watch Video Solution](#)

49. Find the value of wave number ($\bar{\nu}$) in terms of Rydberg's constant, when transition of electron takes place between two levels of He^+ ion whose sum is 4 and difference is 2.

A. $\frac{8R}{9}$

B. $\frac{32R}{9}$

C. $\frac{3R}{4}$

D. none of these

Answer: B



Watch Video Solution

50. What is the wavelength in nm of the spectral line associated with a transition from $n=3$ to $n=2$ for the Li^{2+} ion?

A. 219

B. 656

C. 73.0

D. 486

Answer: C



Watch Video Solution

51. What is the energy (kJ/mol) associated with the de-excitation of an electron from $n = 6$ to $n = 2$ in He^+ ion?

(a) 1.36×10^6

(b) 1.36×10^3

(c) 1.16×10^3

(d) 1.78×10^3

A. 1.36×10^6

B. 1.36×10^3

C. 1.16×10^3

D. 1.78×10^3

Answer: C



Watch Video Solution

52. What is the shortest wavelength line in the Paschen series of Li^{2+} ion?

A. $\frac{R}{9}$

B. $\frac{9}{R}$

C. $\frac{1}{R}$

D. $\frac{9R}{4}$

Answer: C



Watch Video Solution

53. What is the maximum wavelength line in the Lyman series of He^+ ion?

A. $3R$

B. $\frac{1}{3R}$

C. $\frac{4}{4R}$

D. None of these

Answer: B



[Watch Video Solution](#)

54. Which of the following electron transitions in a hydrogen atom will require the largest amount of energy?

A. (a) from $n = 1$ to $n = 2$

B. (b) from $n = 2$ to $n = 4$

C. (c) from $n = 5$ to $n = 1$

D. (d) from $n = 3$ to $n = 5$

Answer: A

 [Watch Video Solution](#)

55. Which electronic transition in a hydrogen atom, starting from the orbit $n=7$, will produce infrared light of wavelength 2170 nm?

(Given: $R_H = 1.09677 \times 10^7 M^{-1}$)

A. $n = 7$ to $n = 4$

B. from $n = 2$ to $n = 4$

C. from $n = 5$ to $n = 1$

D. from $n = 3$ to $n = 5$

Answer: A

 [Watch Video Solution](#)

56. The hydrogen atom in the ground state is excited by mass of monochromatic radiations of wavelength $\lambda \text{ \AA}$. The resulting spectrum consists of maximum 15 different lines . What is the value of λ ? ($R_H = 109737 \text{ cm}^{-1}$).

A. 937.3 \AA

B. 1025 \AA

C. 1236 \AA

D. None of these

Answer: A



[Watch Video Solution](#)

57. Electromagnetic radiation (photon) with highest wavelength result when an electron in the hydrogen atom falls from" $n = 6$ to :

A. (a) $n = 1$

B. (b) $n = 2$

C. (c) $n = 3$

D. (d) $n = 5$

Answer: D



[Watch Video Solution](#)

58. When an electron jumps from L to K shell -

A. (a) energy is absorbed

B. (b) energy is released

C. (c) energy is neither absorbed nor released

D. (d) energy is sometimes absorbed and some times released

Answer: B



[Watch Video Solution](#)

59. How do the energy gaps between successive electron energy levels in an atom vary from low to high n values ?

- A. All energy gaps are the same
- B. The energy gap decreases as n increases
- C. The energy gap increases as n increases
- D. the energy gap changes unpredictably as n increases

Answer: B



[Watch Video Solution](#)

60. The H -spectrum confirms

- A. Heisenberg's uncertainty principle
- B. diffraction
- C. polarization
- D. presence of quantized energy level

Answer: D



[Watch Video Solution](#)

61. The splitting of spectral lines in an external magnetic field is known as the

- A. Zeeman effect
- B. Stark effect
- C. photoelectric effect
- D. None of these

Answer: A



[Watch Video Solution](#)

62. The pressure of colloidal particles of dust in air imparts blue colour to the sky. This is due to

A. absorption of light by atmospheric gases

B. transmission of light

C. wavelength of scattered light

D. all of the above

Answer: D



[Watch Video Solution](#)

63. In photoelectric effect, the number of photoelectrons emitted is proportional to :

A. (a) wavelength of incident light

B. (b) frequency of incident light

C. (c) intensity of incident light

D. (d) atomic mass of an element

Answer: C

 [Watch Video Solution](#)

64. Slope of V_0 vs ν curve is (where V_0 = Stopping potential, ν = subjected frequency)

A. e

B. $\frac{h}{e}$

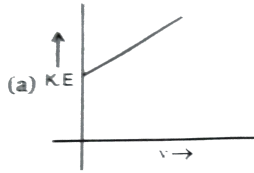
C. ϕ

D. h

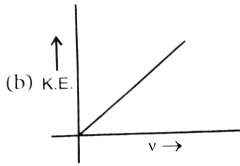
Answer: B

 [Watch Video Solution](#)

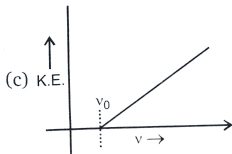
65. According to Einstein's photoelectric equation, the graph between kinetic energy of photoelectrons ejected and the frequency of the incident radiation is :



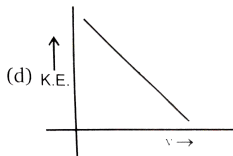
A.



B.



C.



D.

Answer: C



Watch Video Solution

66. The photoelectric emission from a surface starts only when the light incident upon the surface has certain minimum:

A. (a) intensity

B. (b) wavelength

C. (c) Frequency

D. (d) velocity

Answer: C



Watch Video Solution

67. If λ_0 and λ be the threshold wavelength and wavelength of incident light, the velocity of photoelectron ejected from the metal surface is :

A. (a) $\sqrt{\frac{2h}{m}(\lambda_0 - \lambda)}$

B. (b) $\sqrt{\frac{2hc}{m}(\lambda_0 - \lambda)}$

C. (c) $\sqrt{\frac{2hc}{m} \left(\frac{\lambda_0 - \lambda}{\lambda \lambda_0} \right)}$

D. (d) $\sqrt{\frac{2h}{m} \left(\frac{1}{\lambda_0} - \frac{1}{\lambda} \right)}$

Answer: C



Watch Video Solution

68. A light source of wavelength λ illuminates a metal and ejects photoelectron with $(KE)^{\max} = 1eV$.

Another light source of wave length $\frac{\lambda}{3}$, ejects

photoelectrons from same metal with $(KE)^{\max} = 5eV$.

Find the value of work function (eV) of metal.

A. 1 eV

B. 2 eV

C. 0.5 eV

D. None of these

Answer: A



[Watch Video Solution](#)

69. Electromagnetic radiations having $\lambda = 310\text{\AA}$ are subjected to a metal sheet having work function $= 12.8eV$. What will be the velocity of

photoelectrons with maximum Kinetic Energy....

A. (a) 0, no emission will occur

B. (b) 4.352×10^6 m/s

C. (c) 3.09×10^6 m/s

D. (d) 8.72×10^6 m/s

Answer: C



[Watch Video Solution](#)

70. The ratio of slopes of K_{\max} vs. V and V_0 vs. ν curves in the photoelectric effect gives (ν = frequency, K_{\max} = maximum kinetic energy, V_0 =stopping potential) :

A. charge of electron

B. Planck's constant

C. work function

D. the ratio of Planck's constant and electronic charge

Answer: A



[Watch Video Solution](#)

71. Radiation corresponding to the transition $n=4$ to $n=2$ in hydrogen atoms falls on a certain metal (work function = 2.5 eV). The maximum kinetic energy of the photo-electrons will be:

A. (a) 0.55 eV

B. (b) 2.55 eV

C. (c) 4.45 eV

D. (d) None of these

Answer: A



[Watch Video Solution](#)

72. Select the incorrect statement.

- A. K.E. of photo-electron does not depend upon the wavelength of incident radiation
- B. Photoelectric current depends on intensity of incident radiation and not on frequency
- C. Stopping potential depends on frequency of radiation and not on intensity
- D. None of these

Answer: A



[Watch Video Solution](#)

73. Which is the de-Broglie equation?

A. (a) $h = p\lambda$

B. (b) $h = p\lambda^{-1}$

C. (c) $h = \lambda p^{-1}$

D. (d) $h = p + \lambda$

Answer: A



Watch Video Solution

74. Which of the following has the largest de Broglie wavelength (all have equal velocity)?

A. (a) CO_2 molecule

B. (b) NH_3 molecule

C. (c) Electron

D. (d) Proton

Answer: C



Watch Video Solution

75. The de-Broglie wavelength associated with a particle of mass 10^{-6} kg moving with a velocity of 10 m s^{-1} , is

A. $6.63 \times 10^{-22} \text{ m}$

B. $6.63 \times 10^{-29} \text{ m}$

C. $6.63 \times 10^{-31} \text{ m}$

D. $6.63 \times 10^{-34} \text{ m}$

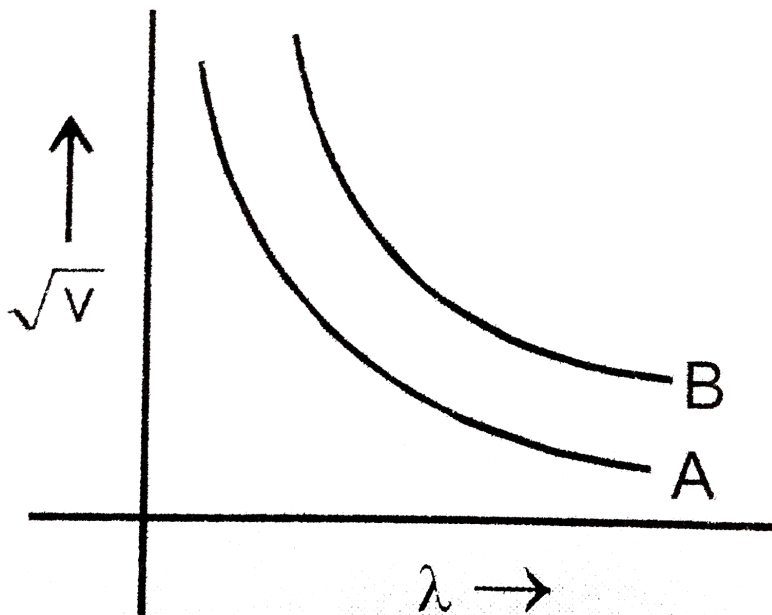
Answer: B



Watch Video Solution

76. For two particles A and B, curves are plotted \sqrt{V} against de-Broglie wavelengths, where V is the potential on the particles. Which of the

following relation is correct about the mass of particles?



A. $m_A = m_B$

B. $m_A > m_B$

C. $m_A < m_B$

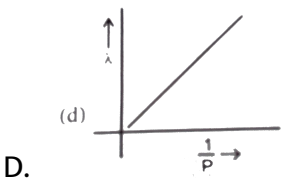
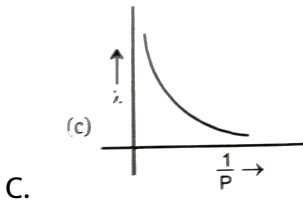
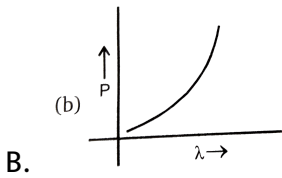
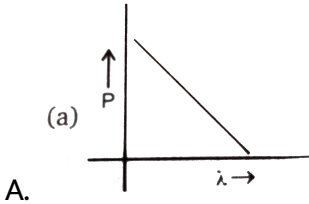
D. $m_A \leq m_B$

Answer: B



Watch Video Solution

77. Which of following graphs correctly represents the variation of particle momentum with de-Broglie wavelength?



Answer: D

 Watch Video Solution

78. An excited state of H atom emits a photon of wavelength λ and returns in the ground state. The principal quantum number of excited state is given by:

A. $\sqrt{\lambda R(\lambda R - 1)}$

B. $\sqrt{\frac{\lambda R}{(\lambda R - 1)}}$

C. $\sqrt{\lambda R(\lambda R - 1)}$

D. $\sqrt{\frac{\lambda R - 1}{(\lambda R)}}$

Answer: B



Watch Video Solution

79. A dye absorbs a photon of wavelength λ and re-emits the same energy into two photons of wavelengths λ_1 and λ_2 respectively. The wavelength λ is related with λ_1 and λ_2 as :

A. $\lambda = \frac{\lambda_1 + \lambda_2}{\lambda_1 \lambda_2}$

$$\text{B. } \lambda = \frac{\lambda_1 \lambda_2}{\lambda_1 + \lambda_2}$$

$$\text{C. } \lambda = \frac{\lambda_1^2 \lambda_2^2}{\lambda_1 + \lambda_2}$$

$$\text{D. } \lambda = \frac{\lambda_1 \lambda_2}{(\lambda_1 + \lambda_2)^2}$$

Answer: B



Watch Video Solution

80. Be^{3+} and a proton are accelerated by the same potential, their de – Broglie wavelengths have the ratio (assume mass of proton = mass of neutron) :

A. 1:2

B. 1:4

C. 1:1

D. $1:3\sqrt{3}$

Answer: D

[Watch Video Solution](#)

81. de Broglie wavelength of an electron after being accelerated by a potential difference of V volt from rest is :

A. $\lambda = \frac{1.23}{h} nm$

B. $\lambda = \frac{1.23}{\sqrt{h}} nm$

C. $\lambda = \frac{1.23}{\sqrt{V}} nm$

D. $\lambda = \frac{1.23}{V} nm$

Answer: C

[Watch Video Solution](#)

82. An electron travels with a velocity of $x \text{ ms}^{-1}$. For a proton to have the same de-Broglie wavelength, the velocity will be approximately:

A. $\frac{1840}{x}$

B. $\frac{x}{1840}$

C. $1840 x$

D. x

Answer: B



Watch Video Solution

83. The momentum (in $kg - m / s$) of photon having 6 MeV energy is :

A. (a) 3.2×10^{-21}

B. (b) 2.0

C. (c) 1.6×10^{-21}

D. (d) none of these

Answer: A



Watch Video Solution

84. The number of photons of light having wave number 'x' in 10 J of energy source is :

A. $10hc x$

B. $\frac{hc}{10x}$

C. $\frac{10}{hc x}$

D. none of these

Answer: C



[Watch Video Solution](#)

85. Which of the following relates to photons both as wave motion and as a stream of particles?

A. interference

B. $E = mc^2$

C. Diffraction

D. $E = h\nu$

Answer: D



Watch Video Solution

86. If a_0 be the radius of first Bohr's orbit of H-atom, the de-Broglie's wavelength of an electron revolving in the second Bohr's orbit will be:

A. $6\pi a_0$

B. $4\pi a_0$

C. $2\pi a_0$

D. None of these

Answer: B



Watch Video Solution

87. Energy required to ionise 2 mole of gaseous He^+ ion present in its ground state is :

- A. 54.4 eV
- B. $108.8N_A$ eV
- C. $54.4N_A$ eV
- D. 108.8eV

Answer: B



[Watch Video Solution](#)

88. Which of the following is the most correct expression for Heisenberg's uncertainty principle?

- A. $\Delta x \cdot \Delta p = \frac{h}{4\pi}$
- B. $\Delta x \cdot \Delta p \geq \frac{h}{4\pi}$
- C. $\Delta x \cdot \Delta p \leq \frac{h}{4\pi}$

$$D. \Delta x \cdot \Delta v = \frac{h}{4\pi}$$

Answer: B



Watch Video Solution

89. The Heisenberg uncertainty principle can be applied to:

- A. a cricket ball
- B. a football
- C. a jet aeroplane
- D. an electron

Answer: D



Watch Video Solution

90. The mass of a particle is $10^{-10}g$ and its radius is $2 \times 10^{-4}cm$. If its velocity is $10^{-6}cm \text{ sec}^{-1}$ with 0.0001 % uncertainty in measurement, the uncertainty in its position is :

A. $5.2 \times 10^{-8}m$

B. $5.2 \times 10^{-7}m$

C. $5.2 \times 10^{-6}m$

D. 5.2×10^{-9}

Answer: A



[Watch Video Solution](#)

91. If an electron is travelling at 200 m/s within 1 m/s uncertainty, what is the theoretical uncertainty in its position in μm (micrometer)?

A. 14.5

B. 29

C. 58

D. 114

Answer: C



Watch Video Solution

92. The wave character of moving electron was experimentally verified by :

(a) de-Broglie

(b) A-Einstein

(c) Garmer

(d) Schrodinger

A. de-Broglie

B. A-Einstein

C. Garmer

D. Schrodinger

Answer: C



[Watch Video Solution](#)

93. "The exact path of electron in 2p-orbital cannot be determined." The above statement is based upon:

- A. Hund's Rule
- B. Bohr's Rule
- C. uncertainty principle
- D. aufbau principle

Answer: C



[Watch Video Solution](#)

94. Which series of subshells is arranged in the order of increasing energy for multi-electron atoms?

- A. 6s,4f,5d,6p

B. 4f,6s,5d,6p

C. 5d,4f,6s,6p

D. 4f,5d,6s,6p

Answer: A



Watch Video Solution

95. The correct Schrodinger's wave equation for a electron with total energy E and potential energy V is given by:

A.
$$\frac{\partial^2 \Psi}{\partial x^2} + \frac{\partial^2 \Psi}{\partial y^2} + \frac{\partial^2 \Psi}{\partial z^2} + \frac{8\pi^2}{mh^2}(E - V)\Psi = 0$$

B.
$$\frac{\partial^2 \Psi}{\partial x^2} + \frac{\partial^2 \Psi}{\partial y^2} + \frac{\partial^2 \Psi}{\partial z^2} + \frac{8\pi m}{h^2}(E - V)\Psi = 0$$

C.
$$\frac{\partial^2 \Psi}{\partial x^2} + \frac{\partial^2 \Psi}{\partial y^2} + \frac{\partial^2 \Psi}{\partial z^2} + \frac{8\pi^2 m}{h^2}(E - V)\Psi = 0$$

D. None of these

Answer: C



Watch Video Solution

96. wave mechanical model of the atom depends upon:

(a) de-Broglie concept of dual nature of electron

(b) Heisenberg uncertainty principle

(c) Schrodinger uncertainty principle

(d) All of these

A. de-Broglie concept of dual nature of electron

B. Heisenberg uncertainty principle

C. Schrodinger uncertainty principle

D. All of these

Answer: D



Watch Video Solution

97. In Schrodinger wave mechanical model $\Psi^2(r, \theta, \phi)$ represents :

- A. amplitude of electron wave
- B. probability density of electron
- C. total probability of finding electron around nucleus
- D. orbit

Answer: B

 [Watch Video Solution](#)

98. Radial amplitude of electron wave can be represented by:

- A. $R(r)$
- B. $R^2(r)$
- C. $4\pi r^2$
- D. $4\pi r^2 R^2(r)$

Answer: A

 [Watch Video Solution](#)

99. Arrange the following orbitals of H-atom in the increasing order of their energy.

$3p_x, 2s, 4d_{xy}, 3s, 4p_z, 3p_y, 4s$

A. $2s < 3s = 3p_x = 3p_y < 4s = 4p_z = 4d_{xy}$

B. $2s < 3s < 3p_x = 3p_y < 4s = 4p_z = 4d_{xy}$

C. $2s < 3s < 3p_x = 3p_y < 4s = 4p_z = 4d_{xy}$

D. $2s < 3s < 3p_x = 3p_y < 4s < 4p_z < 4d_{xy}$

Answer: D



[Watch Video Solution](#)

100. In a hydrogen atom, which orbital is higher in energy than a 3s-orbital?

A. 2s

B. 3p

C. 3d

D. 4s

Answer: D

 [Watch Video Solution](#)

101. The radii of maximum probability for 3s, 3p, and 3d electrons are in the order :

A. (a) $(r_{\max})_{3d} > (r_{\max})_{3p} > (r_{\max})_{3s}$

B. (b) $(r_{\max})_{3d} > (r_{\max})_{3s} > (r_{\max})_{3p}$

C. (c) $(r_{\max})_{3s} > (r_{\max})_{3p} > (r_{\max})_{3d}$

D. (d) None of these

Answer: C

 [Watch Video Solution](#)

102. The correct order of closeness of 3s,3p,3d orbitals of nucleus is :

A. $3d > 3p > 3s$

B. $3s > 3p > 3d$

C. $3s > 3d > 3p$

D. $3d > 3s > 3p$

Answer: B



[Watch Video Solution](#)

103. The correct order of total number of node of atomic orbitals is :

A. $4f > 6s > 5d$

B. $6s > 5d > 4f$

C. $4f > 5d > 6s$

D. $5d > 4f > 6s$

Answer: B

 [Watch Video Solution](#)

104. If the subsidiary quantum number of a subenergy level is 4, then no. of degenerate orbitals are

A. 3

B. 5

C. 9

D. 11

Answer: C

 [Watch Video Solution](#)

105. Which two orbitals are located along the axis, and not between the axis?

A. (a) d_{xy}, d_{z^2}

B. (b) d_{xy}, d_{yz}

C. (c) d_{yz}, d_{zx}

D. (d) $d_{z^2}, d_{x^2 - y^2}$

Answer: D



Watch Video Solution

106. In a set of degenerate orbitals, the electrons distribute themselves to retain similar spins as far as possible. This statement is attributed to :

A. Pauli's exclusion principle

B. aufbau principles

C. Hund's Rule

D. Slater rule

Answer: C



[Watch Video Solution](#)

107. Which of the following rules could explain the presence of three unpaired electrons in N-atom?

- A. Hund's rule
- B. aufbau's principles
- C. Heisenberg's uncertainty principle
- D. Pauli's exculsion principle

Answer: A



[Watch Video Solution](#)

108. Pauli's exculsion principle states that :

- A. nuclues of an atom contains no negative charge
- B. electrons move in circular orbits around the nucleus

C. electrons occupy orbitals of lowest energy

D. All the four quantum number of two electrons in an atom cannot be equal.

Answer: D

 [Watch Video Solution](#)

109. For which of the following sets of quantum numbers, an electrons will have the highest energy ?

A. $n \quad l \quad m \quad s$
3 2 1 $-1/2$

B. $n \quad l \quad m \quad s$
4 3 -1 $+1/2$

C. $n \quad l \quad m \quad s$
4 1 -1 $+1/2$

D. $n \quad l \quad m \quad s$
5 0 0 $-1/2$

Answer: B

 [Watch Video Solution](#)

110. Which of the following statements concerning the four quantum numbers is false?

- A. n gives idea of the size of an orbital
- B. l gives the shape of an orbital
- C. m gives the energy of the electron in the orbital
- D. s gives the direction of spin of the electron in an orbital

Answer: C

 [Watch Video Solution](#)

111. Maximum number of electron in a subshell is given by

- A. $(2l + 1)$
- B. $2(2l + 1)$
- C. $(2l + 1)^2$

D. $2(2l + 1)^2$

Answer: B



Watch Video Solution

112. In any subshell, the maximum number of electrons having same value of spin quantum number is :

A. $\sqrt{l(l + 1)}$

B. $l + 2$

C. $2l + 1$

D. $4l + 2$

Answer: C



Watch Video Solution

113. The orbital angular momentum of $3p$ electron is :

A. $\sqrt{3}h$

B. $\sqrt{6}h$

C. zero

D. $\sqrt{2} \frac{h}{2\pi}$

Answer: D



[Watch Video Solution](#)

114. The atomic orbitals are progressively filled in order of increasing energy. The principle is called as :

A. Hund's rule

B. aufbau's principle

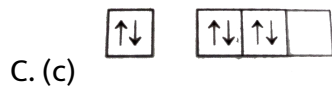
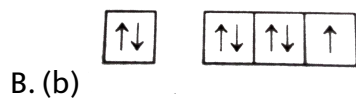
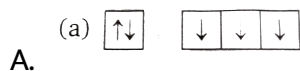
C. exclusion principle

D. de-Broglie rule

Answer: B

 [Watch Video Solution](#)

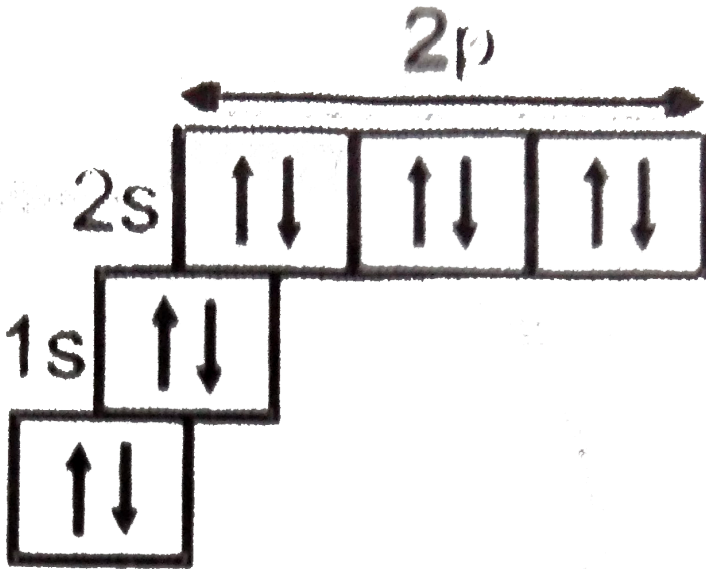
115. The orbital diagram in which both Pauli's exclusion principle and Hund's rule are violated, is :



Answer: D

 [Watch Video Solution](#)

116. Which of the following elements is represented by the electronic configuration ?



- A. Nitrogen
- B. Fluorine
- C. Oxygen
- D. Neon

Answer: D

 Watch Video Solution

117. The ratio of magnetic of Fe (III) and Co (II) is :

A. $\sqrt{5} : \sqrt{7}$

B. $\sqrt{35} : \sqrt{15}$

C. 7 : 3


D. $\sqrt{24} : \sqrt{15}$

Answer: B



Watch Video Solution

118. If the electronic structure of oxygen atom is written as $1s^2, 2s^2 2p^4$ it



would violate

- A. Hund's rule
- B. Pauli's exclusion principle
- C. both Hund's and Pauli's principle
- D. None of these

Answer: A



[Watch Video Solution](#)

119. A compound of vanadium has a magnetic moment (μ) of $1.73BM$. If the vanadium ion in the compound is present as V^{x+} , then, the value of x is ?

A. 1

B. 2

C. 3

D. 4

Answer: D



[Watch Video Solution](#)

120. d^6 configuration will result in total spin of :

A. $\frac{3}{2}$

B. $\frac{1}{2}$

C. 2

D. 1

Answer: C



Watch Video Solution

121. The probability of finding electron in d_{xy} orbital is :

- A. along $X -$ and $Y -$ axis
- B. along $X -$ and $Z -$ axis
- C. along $Y -$ and $Z -$ axis
- D. at an angle of 45° with X-axis

Answer: D



Watch Video Solution

122. Select correct statement :

- A. The lower the value of $(n + l)$ for an orbital, the higher is its energy.
- B. If two orbitals have the same value of $(n + l)$ the orbital with higher value of n will have lower energy.
- C. The energy of an electron in a multi-electron atom depends on quantum number n only
- D. The energy of an electron in hydrogen atom depends on quantum number n only

Answer: D



[Watch Video Solution](#)

123. Read the following statements and choose the correct option. (I) If the radius of the first Bohr orbit of hydrogen atom is r and of 2^{nd} orbit of Li^{2+} would be $4r$. (II) For s-orbital electron, the orbital angular momentum is zero

A. only I is correct

B. only II is correct

C. both are correct

D. both are incorrect

Answer: B

 [Watch Video Solution](#)

124. The quantum number of four electrons (e_1 to e_4) are given below :-

	n	l	m	s
e_1	3	0	0	$+1/2$
e_2	4	0	0	$1/2$
e_3	3	2	2	$-1/2$
e_4	3	1	-1	$1/2$

The correct order of decreasing energy of these electrons is :

A. $e_4 > e_3 > e_2 > e_1$

B. $e_2 > e_3 > e_4 > e_1$

C. $e_3 > e_2 > e_4 > e_1$

D. $e_1 > e_4 > e_2 > e_3$

Answer: C



Watch Video Solution

125. The energy of an electron of $2p_x$ orbital is :

- A. greater than $2p_y$ orbital
- B. less than $2p_z$ orbital
- C. equal to 2s orbital
- D. same as that of $2p_x$ and $2p_z$ orbital

Answer: D



Watch Video Solution

126. In group 15 elements, the number of unpaired electrons in valence shell is_____.

- A. 0
- B. 2
- C. 3
- D. 4

Answer: C



[Watch Video Solution](#)

127. The orientation of an orbital is governed by the quantum number known as and is represented by the symbol

- A. principal quantum number (n)
- B. angular momentum quantum number
- C. magnetic quantum number (m_l)

D. spin quantum number (m_s)

Answer: C



[Watch Video Solution](#)

128. What is the maximum number of electrons in a subshell that can have the quantum numbers $n = 3$ and $l = 2$?

A. 2

B. 5

C. 6

D. 10

Answer: D



[Watch Video Solution](#)

129. which of the following statements about an electron with $m_l = +2$ is incorrect?

- A. The electron could be in the third shell
- B. The electron is in a non-spherical orbital
- C. The electron may have $m_s = \frac{1}{2}$
- D. The electron is not in a d-orbital

Answer: D

 [Watch Video Solution](#)

130. which of the following set of quantum numbers is impossible for an electron?

- A. $n = 1, l = 0, m_l = 0, m_s = +\frac{1}{2}$
- B. $n = 9, l = 7, m_l = -6, m_s = -\frac{1}{2}$
- C. $n = 2, l = 1, m_l = 0, m_s = +\frac{1}{2}$

$$D. n = 3, l = 2, m_l = -3, m_s = +\frac{1}{2}$$

Answer: D



[Watch Video Solution](#)

131. In a 3d subshell, all the five orbitals are degenerate. What does it mean?

- A. All the orbitals have the same orientation.
- B. All the orbitals have the same shape.
- C. All the orbitals have the same energy.
- D. All the orbitals are unoccupied.

Answer: C



[Watch Video Solution](#)

132. which of the following subshell can accommodate as many as 10 electrons?

A. (a) 2d

B. (b) 3d

C. (c) $3d_{xy}$

D. (d) $3d_{z^2}$

Answer: B



[Watch Video Solution](#)

133. which of the following statements is correct for an electron having azimuthal quantum number $l=2$?

A. (a) The electron may be in the lowest energy shell.

B. (b) The electron is in a spherical orbital.

C. (c) The electron must have spin $m_s = +\frac{1}{2}$

D. (d) The electron may have a magnetic quantum number $= -1$

Answer: D

 [Watch Video Solution](#)

134. which of the following statements is incorrect?

- A. The concepts of "penetration" and "shielding" are important in deciding the energetic ordering of orbitals in multi-electron atoms
- B. A wave-function can have positive and negative values
- C. "Radial nodes" can appear in radial probability distribution function.
- D. The shape of an orbital is given by the principal quantum number.

Answer: D

 [Watch Video Solution](#)

135. For an $4p_y$ orbital, there are nodal plane..... and azimuthal quantum number l

A. (a) 1,0

B. (b) 0,1

C. (c) 1,1

D. (d) 2,1

Answer: C



[Watch Video Solution](#)

136. which of the following statement is correct?

A. (a) Number of angular nodes $=n-l-1$

B. (b) Number of radial nodes $=l$


C. (c) Total number of nodes $=n-1$

D. (d) All of these

Answer: C

 Watch Video Solution

137. Give the correct order of initials T(true)F(false) for following statements. (I) If electron has zero quantum magnetic numbers, then it must be present in s-orbital



(II) In

orbital

diagram, Pauli's exclusion principal is violated

(III) Bohr's model can explain spectrum of the hydrogen atom.

(IV) A d-orbital can accommodate maximum 10 electrons only.

A. (a) TFFF

B. (B) FFTF

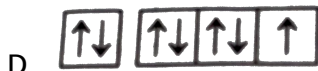
C. (C) TFFT

D. (D) FFTT

Answer: D

 Watch Video Solution

138. The orbital diagram in which both the Pauli's exclusion principle and Hund's rule are violated is :



Answer: A

 Watch Video Solution

139. It is not possible to explain the Pauli's exclusion principal with the help of this atom.

A. B

B. Be

C. C

D. H

Answer: D



[Watch Video Solution](#)

140. The subshell that rises after f subshell is called g subshell

What is the total number of orbitals in the shell in which the g subshell first occur?

A. 9

B. 16

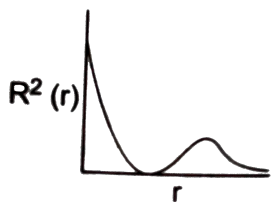
C. 25

D. 36

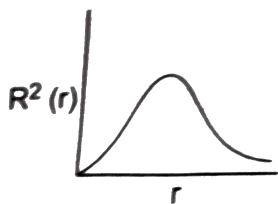
Answer: A

 [Watch Video Solution](#)

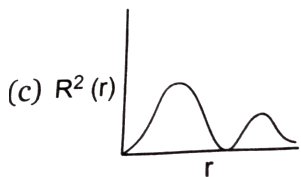
141. The variation of radial probability density $R^2(r)$ as a function of distance r of the electron from the nucleus for 3p orbital:



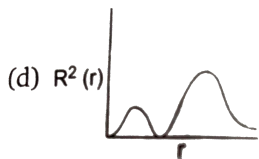
(A)(a)



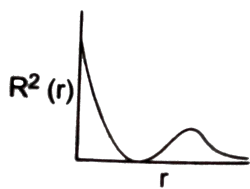
(b)(b)



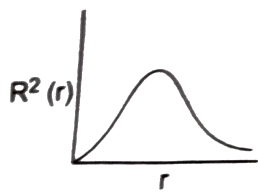
(c)



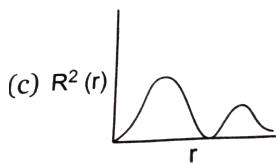
(d)



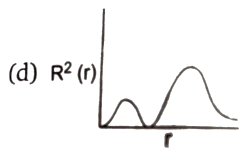
A. (a)



B. (b)



C.



D.

Answer: D



[Watch Video Solution](#)

142. In iron atom, how many electrons have $n=3$ and $l=2$?

A. 2

B. 4

C. 6

D. 8

Answer: C



[Watch Video Solution](#)

143. For similar orbitals having different values of n :

A. the most probable distance increases with increases in n

B. the most probable distance decrease with increase in n

C. the most probable distance remains constant with increase in n

D. none of these

Answer: A



Watch Video Solution

144. If n and l are respectively the principal and azimuthal quantum numbers, then the expression for calculating the total number of electrons in any energy level is :

$$(a) \sum_{l=0}^{l=n} 2(2l + 1)$$

$$(b) \sum_{l=1}^{l=n} 2(2l + 1)$$

$$(c) \sum_{l=0}^{l=n} 2(2l + 1)$$

$$(d) \sum_{l=0}^{l=n-1} 2(2l + 1)$$

$$A. \sum_{l=0}^{l=n} 2(2l + 1)$$

B. $\sum_{l=1}^{l=n} 2(2l + 1)$

C. $\sum_{l=0}^{l=n} 2(2l + 1)$

D. $\sum_{l=0}^{l=n-1} 2(2l + 1)$

Answer: D

 [Watch Video Solution](#)

145. Maximum number of nodes are present in :

A. 5s

B. 5p

C. 5d

D. All have same number of nodes

Answer: D

 [Watch Video Solution](#)

146. The possible correct set of quantum numbers for the unpaired electron of Cl atom is:

A. $2, 0, 0, +\frac{1}{2}$

B. $2, 1, -1, +\frac{1}{2}$

C. $3, 1, 1, +\frac{1}{2}$

D. $3, 0, 0, \pm\frac{1}{2}$

Answer: C

 [Watch Video Solution](#)

147. The aufbau principle implies that a new electron will enter an orbital for which:

A. (a) n has a lower value

B. (b) l has a lower value

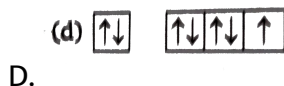
C. (c) $(n+l)$ value is maximum

D. (d) $(n+1)$ value is minimum

Answer: D

 [Watch Video Solution](#)

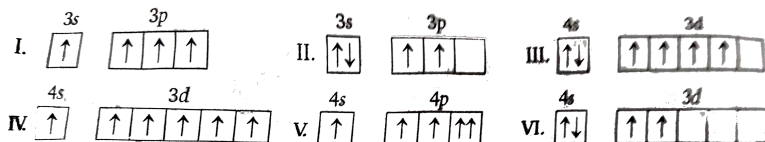
148. the orbital diagram in which aufbau principal is violated is :



Answer: B

 [Watch Video Solution](#)

149. Consider the following six electronic configurations (remaining inner orbitals are completely filled) and mark the incorrect option.



A. Stability order : $II > I > IV > III$

B. Order of spin multiplicity : $IV > III = I > II$

C. V does not violate all the three rule of electronic configuration

D. If IV represents A than A^+ when kept near a magnet, acts as paramagnetic substance.

Answer: A

 [Watch Video Solution](#)

150. Which of the following set of quantum numbers shows orbital of highest energy ?

A. $n = 4, l = 0, m = 0, s = +\frac{1}{2}$

B. $n = 2, l = 0, m = 0, s = +\frac{1}{2}$

C. $n = 3, l = 1, m = 1, s = +\frac{1}{2}$

D. $n = 3, l = 2, m = 1, s = +\frac{1}{2}$

Answer: D

 [Watch Video Solution](#)

151. A subshell $n = 5, l = 3$ can accommodate :

A. 10electrons

B. 14 electrons

C. 18 electrons

D. None of these

Answer: B

 [Watch Video Solution](#)

152. In H-atom energy of electron is determined by :

A. only n

B. n, l

C. n, l, m

D. all the four quantum numbers.

Answer: A



[Watch Video Solution](#)

153. In iron atom, how many electrons have $n=3$ and $l=2$?

A. 2

B. 2

C. 6

D. 8

Answer: C



[Watch Video Solution](#)

154. How many electrons in an atom can have $n = 4$, $l = 2$, $m = -2$ and

$$s = +\frac{1}{2}?$$

A. 1

B. 2

C. 5

D. 10

Answer: D



[Watch Video Solution](#)

155. The degeneracy of 1st excited state of H atom is _____ (Ignore effect of spin)

- A. 2
- B. 3
- C. 4
- D. 8

Answer: C



[Watch Video Solution](#)

156. Not considering the electron spin, the degeneracy of second excited state of H is 9, while the degeneracy of then first excited state of H^- is :

- A. 1
- B. 2
- C. 3

D. 4

Answer: A



Watch Video Solution

157. Which orbital has only positive value of wave function at all distances from the nucleus :

(a)1s

(b)2s

(c)3p

(d)3d

A. 1s

B. 2s

C. 3p

D. 3d

Answer: A



Watch Video Solution

158. Four electrons in an atom have the set of quantum numbers as given below. Which electron is at the highest energy level ?

A. (a) $n = 4, l = 0, m_l = 0, m_s = +\frac{1}{2}$

B. (b) $n = 3, l = 0, m_l = 0, m_s = -\frac{1}{2}$

C. (c) $n = 3, l = 2, m_l = 0, m_s = +\frac{1}{2}$

D. (d) $n = 4, l = 1, m_l = -1, m_s = -\frac{1}{2}$

Answer: D



Watch Video Solution

159. The set of quantum numbers, $n = 3, l = 2, m_l = 0$

A. describes an electron in a 2s orbital

B. is not allowed

C. describes an electron in a 3p orbital

D. describes one of the five orbitals of same energy

Answer: D

 [Watch Video Solution](#)

160. The set of quantum numbers, $n = 2, l = 2, m_l = 0$:

A. (a) describes an electron in a 2s orbital

B. (b) describes one of the five orbital of a similar type

C. (c) describes an electron in a 2p orbitals

D. (d) is not allowed

Answer: B

 [Watch Video Solution](#)

161. Consider the argon atom. For how many electrons does this atom have $m_l = 1$?

A. (a) 1

B. (b) 6

C. (c) 4

D. (d) 2

Answer: C



[Watch Video Solution](#)

162. An orbital is occupied by an electrons with the quantum numbers $n = 4, l = 1$. How many orbitals of this type are found in a multi- electron atom ?

A. (a) 4p, 3

B. (b) 4s, 1

C. (c) 4d, 5

D. (d) 4p, 6

Answer: A

 [Watch Video Solution](#)

163. Which of the following sets of quantum numbers describes the electron which is removed most easily from a potassium atom in its ground state ?

A. $n = 3, l = 1, m_l = 1, m_s = -\frac{1}{2}$

B. $n = 2, l = 1, m_l = 0, m_s = -\frac{1}{2}$

C. $n = 4, l = 0, m_l = 1, m_s = +\frac{1}{2}$

D. $n = 4, l = 0, m_l = 0, m_s = +\frac{1}{2}$

Answer: D

 [Watch Video Solution](#)

164. The subshell that arises after f is called the g subshell. How many electrons may occupy the g subshell?

A. 9

B. 7

C. 5

D. 18

Answer: D

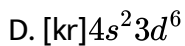
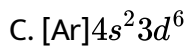


[Watch Video Solution](#)

165. Which of the following electron configurations is correct for iron, (atomic number 26)?

A. $[\text{kr}]4s^13d^6$

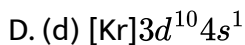
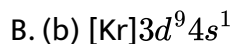
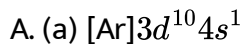
B. $[\text{kr}]4s^13d^7$



Answer: C

 [Watch Video Solution](#)

166. Which of the following electron configurations is correct for copper, (atomic number 29)



Answer: A

 [Watch Video Solution](#)

167. The electron configurations of $(24)Cr$ and $(29)Cu$ are abnormal

A. (a) due to extra stability of exactly half filled

and exactly fully filled sub shells

B. (b) because they belong to d-block

C. (c) both the above

D. (d) None of the above

Answer: A



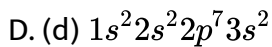
[Watch Video Solution](#)

168. Which of the following representations of excited states of atoms is impossible?

A. (a) $1s^1 2s^1$

B. (b) $[Ne] 3s^2 3p^3 4s^1$

C. (c) $[Ne] 3s^2 3p^6 4s^1 3d^6$

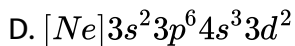
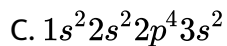
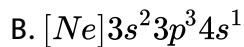
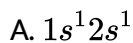


Answer: D



[Watch Video Solution](#)

169. Among the following representations of excited states of atoms which is impossible?

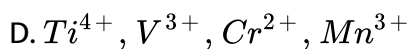
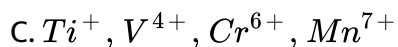
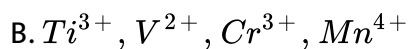
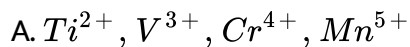


Answer: D



[Watch Video Solution](#)

170. Among the following series of transition metal ions the one where all metal ions have $3d^2$ electronic configuration is



Answer: A



[Watch Video Solution](#)

171. Which of the following has the maximum number of unpaired electrons?

A. Mn

B. Ti

C. V

D. Al

Answer: A



Watch Video Solution

172. Which of the following orbitals has two spherical nodes?

A. (a) 2s

B. (b) 4s

C. (c) 3d

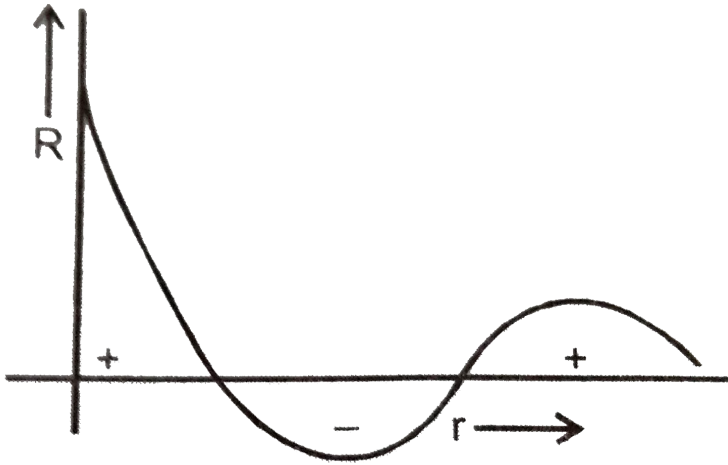
D. (d) 6f

Answer: D



Watch Video Solution

173. Wave function of an orbital is plotted against the distance from nucleus. The graphical representation is of :



- A. 1s
- B. 2s
- C. 3s
- D. 2p

Answer: C

 [Watch Video Solution](#)

174. The Schrodinger wave equation for hydrogen atom is

$$\Psi_{2s} = \frac{1}{4\sqrt{2\pi}} \left(\frac{1}{a_0} \right)^{3/2} \left(2 - \frac{r}{a_0} \right) e^{-r/a_0}, \text{ where } a_0 \text{ is Bohr's radius. If}$$

the radial node in 2s be at r_0 , then r_0 would be equal to :

A. $\frac{a_0}{2}$

B. $2a_0$

C. $\sqrt{2}a_0$

D. $\frac{a_0}{\sqrt{2}}$

Answer: B



Watch Video Solution

175. The Schrodinger wave equation for hydrogen atom is

$$\Psi(\text{radial}) = \frac{1}{16\sqrt{4}} \left(\frac{Z}{a_0} \right)^{3/2} [(\sigma - 1)(\sigma^2 - 8\sigma + 12)] e^{-\sigma/2}$$

where a_0 and Z are the constant in which answer can be expressed and

$$\sigma = \frac{2Zr}{a_0}$$

minimum and maximum position of radial nodes from nucleus are ... respectively.

A. $\frac{a_0}{Z}, \frac{3a_0}{Z}$

B. $\frac{a_0}{2Z}, \frac{a_0}{Z}$

C. $\frac{a_0}{2Z}, \frac{3a_0}{Z}$

D. $\frac{a_0}{2Z}, \frac{4a_0}{Z}$

Answer: C



Watch Video Solution

Level 2

1. Potential energy of electron present in He^+ is :

A. (a) $\frac{e^2}{2\pi\epsilon_0 r}$

B. (b) $\frac{3e^2}{4\pi\epsilon_0 r}$

C. (c) $\frac{-2e^2}{4\pi\epsilon_0 r}$

D. (d) $\frac{-e^2}{4\pi\epsilon_0 r^2}$

Answer: C



Watch Video Solution

2. A single electron in an ion has ionization energy equal to 217.6eV .

What is the total number of neutrons present in one ion of it?

A. (a) 2

B. (b) 4

C. (c) 5

D. (d) 9

Answer: C



Watch Video Solution

3. For a hypothetical hydrogen like atom, the potential energy of the system is given by $U(r) = \frac{-Ke^2}{r^3}$, where r is the distance between the two particles. If Bohr's model of quantization of angular momentum is applicable then velocity of particle is given by:

A. $v = \frac{n^2 h^3}{Ke^2 8\pi^3 m^2}$

B. $v = \frac{n^3 h^3}{8Ke^2 \pi^3 m^2}$

C. $v = \frac{n^3 h^3}{24Ke^2 \pi^3 m^2}$

D. $v = \frac{n^2 h^3}{24Ke^2 \pi^3 m^2}$

Answer: C

 [Watch Video Solution](#)

4. A small piece of mass m moves in such a way the P.E. $= -\frac{1}{2}mkr^2$. Where k is a constant and r is the distance of the particle from origin. Assuming Bohr's model of quantization of angular momentum and circular orbit, r is directly proportional to :

(a) n^2

(b) n

(c) \sqrt{n}

(d) none of these

A. n^2

B. n

C. \sqrt{n}

D. none of these

Answer: C



Watch Video Solution

5. A beam of specific kind of particles of velocity $2.1 \times 10^7 m/s$ is scattered by a gold ($Z = 79$) nuclei. Find out specific charge (charge/mass) of this particle if the distance of closest approach is $2.5 \times 10^{-14} m$.

A. $4.84 \times 10^7 \text{ C/kg}$

B. $4.84 \times 10^{-7} \text{ C/kg}$

C. $2.42 \times 10^7 \text{ C/kg}$

D. $3 \times 10^{-12} \text{ C/kg}$

Answer: A



Watch Video Solution

6. What is the angular velocity (ω) of an electron occupying second orbit of Li^{2+} ion?

(a) $\frac{8\pi^3 me^4}{h^3} K^2$

(b) $\frac{8\pi^3 me^4}{9h^3} K^2$

(c) $\frac{64}{9} \times \frac{\pi^3 me^4}{h^3} K^2$

(d) $\frac{9\pi^3 me^4}{h^3} K^2$

A. $\frac{8\pi^3 me^4}{h^3} K^2$

B. $\frac{8\pi^3 me^4}{9h^3} K^2$

C. $\frac{64}{9} \times \frac{\pi^3 m e^4}{h^3} K^2$

D. $\frac{9\pi^3 m e^4}{h^3} K^2$

Answer: D



Watch Video Solution

7. The ratio of the radius difference between 4th and 3rd orbit of H-atom and that of Li^{2+} ion is :

A. (a) 1 : 1

B. (b) 3 : 1

C. (c) 3 : 4

D. (d) 9 : 1

Answer: B



Watch Video Solution

8. The velocity of an e in excited state of H-atom is $1.093 \times 10^6 \text{ m/s}$, what is the circumference of this orbit?

A. (a) $3.32 \times 10^{-10} \text{ m}$

B. (b) $6.64 \times 10^{-10} \text{ m}$

C. (c) $13.30 \times 10^{-10} \text{ m}$

D. (d) $13.28 \times 10^{-8} \text{ m}$

Answer: C



Watch Video Solution

9. The angular momentum of an electron in a Bohr's orbit of He^+ is $3.1652 \times 10^{-34} \text{ kg-m}^2/\text{sec}$. What is the wave number in terms of Rydberg constant (R) of the spectral line emitted when an electron falls from this level to the first excited state. [Use $h = 6.626 \times 10^{-34} \text{ Js}$]

A. (a) $3R$

B. (b) $\frac{5R}{9}$

C. (c) $\frac{3R}{4}$

D. (d) $\frac{8R}{9}$

Answer: B



Watch Video Solution

10. If radiation corresponding to second line of "Balmer series" of Li^{+2} ion, knocked out electron from first excited state of H-atom, then kinetic energy of ejected electron would be:

A. (a) $2.55eV$

B. (b) $4.25eV$

C. (c) $11.25eV$

D. (d) $19.55eV$

Answer: D

[Watch Video Solution](#)

11. When an electron makes a transition from $(n + 1)$ state of n th state, the frequency of emitted radiations is related to n according to $(n > 1)$:

A. (a) $v = \frac{2cRZ^2}{n^3}$

B. (b) $v = \frac{cRZ^2}{n^4}$

C. (c) $v = \frac{cRZ^2}{n^2}$

D. (d) $v = \frac{2cRZ^2}{n^2}$

Answer: A

[Watch Video Solution](#)

12. In a collection of H-atoms, all the electrons jump from $n=5$ to ground level finally (directly or indirectly) ,without emitting any line in Balmer series. The number of possible different radiations is :

A. (a) 10

B. (b) 8

C. (c) 7

D. (d) 6

Answer: C

 [Watch Video Solution](#)

13. An electron is allowed to move freely in a closed cubic box of length of side 10 cm. The uncertainty in its velocity will be :

A. (a) $3.35 \times 10^{-4} \text{ m sec}^{-1}$

B. (b) $5.8 \times 10^{-4} \text{ m sec}^{-1}$

C. (c) $4 \times 10^{-5} \text{ m sec}^{-1}$

D. (d) $4 \times 10^{-6} \text{ m sec}^{-1}$

Answer: B

14. An element undergoes a reaction as shown $sx + 2e^- \rightarrow x^{-2}$

Energy released = 30.87 eV/atom. If the energy released is used to dissociate 4g of H_2 molecules equally into H^+ and H^+ is excited state of H atoms where the electron travels in orbit whose circumference equal to four times its de Broglie's wavelength. Determine the minimum number of moles of x that would be required.

Given IE of $H = 13.6$ eV/atom, bond energy of $H_2 = 4.52$ eV/molecule

- (a) 1
- (b) 2
- (c) 3
- (d) 4

- A. 1
- B. 2
- C. 3
- D. 4

Answer: B



Watch Video Solution

15. Ground state energy of H-atom is $(-E_1)$, the velocity of photoelectrons emitted when photon of energy E_2 strikes stationary Li^{2+} ion in ground state will be:

A. (a) $v = \sqrt{\frac{2(E_p - E)}{m}}$

B. (b) $v = \sqrt{\frac{2(E_p + 9E)}{m}}$

C. (c) $v = \sqrt{\frac{2(E_p - 9E)}{m}}$

D. (d) $v = \sqrt{\frac{2(E_p - 3E)}{m}}$

Answer: C



Watch Video Solution

16. At which temperature will the translational kinetic energy of H-atom equal to that for H-atom of first line Lyman transition? (Given $N_A = 6 \times 10^{23}$)

A. (a) $780K$

B. (b) $1.32 \times 10^{95}K$

C. (c) 7.84×10^4K

D. (d) $1000K$

Answer: C



Watch Video Solution

17. For a 3s - orbital, value of Φ is given by following relation:

$$\Psi(3s) = \frac{1}{9\sqrt{3}} \left(\frac{1}{a_0} \right)^{3/2} (6 - 6\sigma + \sigma^2) e^{-\sigma/2}, \quad \text{where } \sigma = \frac{2r \cdot Z}{3a_0}$$

What is the maximum radial distance of node from nucleus?

A. $\frac{(3 + \sqrt{3})a_0}{Z}$

B. $\frac{a_0}{Z}$

C. $\frac{3}{2} \frac{(3 + \sqrt{3})a_0}{Z}$

D. $\frac{2a_0}{Z}$

Answer: C



Watch Video Solution

18. Monochromatic radiation of specific wavelength is incident on H-atoms in ground state. H-atoms absorb energy and emit subsequently radiations of six different wavelength. Find wavelength of incident radiations:

A. (a) 9.75nm

B. (b) 50nm

C. (c) 85.8nm

D. (d) 97.25nm

Answer: D



Watch Video Solution

19. The energy of a I,II and III energy levels of a certain atom are E , $\frac{4E}{3}$ and $2E$ respectively. A photon of wavelength λ is emitted during a transition from III to I. what will be the wavelength of emission for II to I?

A. $\frac{\lambda}{2}$

B. λ

C. 2λ

D. 3λ

Answer: D



Watch Video Solution

20. Calculate the minimum and maximum number of electrons which may have magnetic quantum number $m = +1$ and spin quantum number $s = +\frac{1}{2}$ in chromium (Cr)

(a) 0,1

(b) 1,2

(c) 4,6

(d) 2,3

A. (a) 0,1

B. (b) 1,2

C. (c) 4,6

D. (d) 2,3

Answer: D



Watch Video Solution

21. An electron in a hydrogen atom in its ground state absorbs 1.5 times as much energy as the minimum required for it to escape from the atom.

What is the velocity of the emitted electron?

A. 1.54×10^6 m/s

B. 1.54×10^8 m/s

C. 1.54×10^3 m/s

D. 1.54×10^4 m/s

Answer: A



[Watch Video Solution](#)

22. In a measurement of quantum efficiency of photosynthesis in green plants, it was found that 10 quanta of red light of wavelength 6850 \AA were needed to release one molecule of O_2 . The average energy storage in this process for 1 mol O_2 evolved is 112 Kcal.

What is the energy conversion efficiency in this experiment?

Given: $1 \text{ cal} = 4.18 \text{ J}$, $N_A = 6 \times 10^{23}$, $h = 6.63 \times 10^{-34} \text{ J}\cdot\text{s}$

A. 23.5

B. 26.9

C. 66.34

D. 73.1

Answer: B



[Watch Video Solution](#)

23. A hydrogen like species (atomic number Z) is present in a higher excited state of quantum number n . This excited atom can make a transition to the first excited state by successive emission of two photons of energies 10.20 eV and 17.0 eV respectively. Alternatively, the atom from the same excited state can make a transition to the second excited state by successive of two photons of energy 4.25 eV and 5.95 eV respectively. Determine the value of Z .

A. 1

B. 2

C. 3

D. 4

Answer: C



Watch Video Solution

24. H-atom is exposed to electromagnetic radiation of $\lambda = 1025.6 \text{ \AA}$ and excited atom gives out induced radiation. What is the minimum wavelength of the induced radiation?

(a) 102.6 nm

(b) 12.09 nm

(c) 121.6 nm

(d) 810.8 nm

A. 102.6 nm

B. 12.09 nm

C. 121.6 nm

D. 810.8 nm

Answer: A



Watch Video Solution

25. If the lowest energy X-rays have $\lambda = 3.055 \times 10^{-8}$ m, estimate the minimum difference in energy between two Bohr's orbits such that an electronic transition would correspond to the emission of an X-ray. Assuming that the electrons in other shells exert no influence, at what Z (minimum) would a transition from the second level to the first result in the emission of an X-ray?

A. 1

B. 2

C. 3

Answer: B



Watch Video Solution

26. An α -particle having kinetic energy 5 MeV falls on a Cu-foil. The shortest distance from the nucleus of Cu to which α -particle reaches is

(Atomic no. of Cu=29, $K = 9 \times 10^9 \text{ Nm}^2 / \text{C}^2$)

(a) $2.35 \times 10^{-13} \text{ m}$

(b) $1.67 \times 10^{-14} \text{ m}$

(c) $5.98 \times 10^{-15} \text{ m}$

(d) none of these

A. (a) $2.35 \times 10^{-13} \text{ m}$

B. (b) $1.67 \times 10^{-14} \text{ m}$

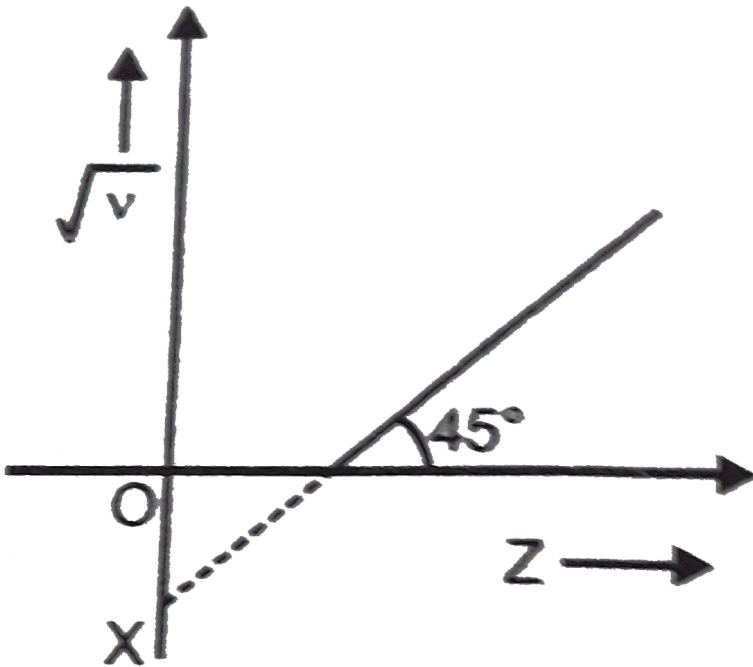
C. (c) $5.98 \times 10^{-15} \text{ m}$

D. (d) none of these

Answer: B

 Watch Video Solution

27. In the graph between $\sqrt{\nu}$ and Z for the Mosley's equation $\sqrt{\nu}=a(Z-b)$, the intercept OX is -1 on $\sqrt{\nu}$ axis.



What is the frequency when atomic number (Z) is 51?

A. $50s^{-1}$

B. $100s^{-1}$

C. $2500s^{-1}$

D. None of these

Answer: C



Watch Video Solution

28. Balmer gave an equation for wavelength of visible region of H-spectrum as $\lambda = \frac{Kn^2}{n^2 - 4}$.

Where n = principal quantum number of energy level, K = constant in terms of R (Rydberg constant).

The value of K in term of R is :

A. (a) R

B. (b) $\frac{R}{2}$

C. (c) $\frac{4}{R}$

D. (d) $\frac{5}{R}$

Answer: C



[Watch Video Solution](#)

29. The energy of separation of an electron in a hydrogen like atom in excited state is 3.4eV. The de-Broglie wave length (in Å) associated with the electron is :

- A. (a) 3.33
- B. (b) 6.66
- C. (c) 13.31
- D. (d) none of these

Answer: B



[Watch Video Solution](#)

30. If I excitation energy for the H-like (hypothetical) sample is 24 eV, then binding energy in III excited state is :

(a) 2eV

(b) 3eV

(c) 4eV

(d) 5eV

A. 2 eV

B. 3 eV

C. 4 eV

D. 5 eV

Answer: A



Watch Video Solution

1. If the uncertainties in position and momentum are equal, the uncertainty in the velocity is :

A. $\sqrt{\frac{h}{\pi}}$

B. $\sqrt{\frac{h}{2\pi}}$

C. $\frac{1}{2m} \sqrt{\frac{h}{\pi}}$

D. none of these

Answer: C



[Watch Video Solution](#)

2. Werner Heisenberg considered the limits of how precisely we can measure the properties of an electron or other microscopic particle. He determined that there is a fundamental limit to how closely we can measure both position and momentum. The more accurately we measure the momentum of a particle, the less accurately we can determine its position. The converse also true. This is summed up in what we now call

the Heisenberg uncertainty principle.

$$\Delta x \cdot \Delta(mv) \geq \frac{h}{4\pi}$$

The uncertainty in the position or in the momentum of a macroscopic object like a baseball is too small to observe. However, the mass of a microscopic object such as an electron is small enough for the uncertainty to be relatively large and significant.

If the uncertainty in velocity and position is the same, then the uncertainty in momentum will be :

A. $\sqrt{\frac{hm}{4\pi}}$

B. $m\sqrt{\frac{h}{4\pi}}$

C. $\sqrt{\frac{h}{4\pi m}}$

D. $\frac{1}{m}\sqrt{\frac{h}{4\pi}}$

Answer: A



Watch Video Solution

3. What would be the minimum uncertainty in de-Broglie wavelength of a moving electron accelerated by potential difference of 6 volt and whose uncertainty in position is $\frac{7}{22}$ nm?

A. 6.25\AA

B. 6\AA

C. 0.625\AA

D. 0.3125\AA

Answer: C



[Watch Video Solution](#)

Level 3 Passage 2

1. If the wavelength of series limit of Lyman series for He^+ ion is $x\text{\AA}$, then what will be the wavelength of series limit of Balmer series for Li^{2+} ion?

A. $\frac{9x}{4} \text{ \AA}$

B. $\frac{16x}{9} \text{ \AA}$

C. $\frac{5x}{4} \text{ \AA}$

D. $\frac{4x}{7} \text{ \AA}$

Answer: B



Watch Video Solution

2. The emission spectra is observed by the consequence of transition of electrons from higher energy state to ground state of He^+ ion. Six different photons are observed during the emission spectra, then what will be the minimum wavelength during the transition?

A. $\frac{4}{27R_H}$

B. $\frac{4}{15R_H}$

C. $\lambda = \frac{15}{16R_H}$

D. $\frac{16}{15R_H}$

Answer: B



Watch Video Solution

3. What transition in the hydrogen spectrum would have the same wavelength as Balmer transition, $n = 4$ to $n = 2$ in the He^+ spectrum?

A. $n=3$ to $n=1$

B. $n=3$ to $n=2$

C. $n=4$ to $n=1$

D. $n=2$ to $n=1$

Answer: D



Watch Video Solution

4. An electron in H-atom in M-shell on de-excitation to ground state gives maximum spectrum lines.

- A. 3
- B. 6
- C. 2
- D. 1

Answer: A

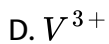


[Watch Video Solution](#)

Level 3 Passage 3

1. Which of the following ion has lowest magnetic moment?





Answer: D

 [Watch Video Solution](#)

2. If magnetic moment is zero the substance is diamagnetic.

If an ion of $25(Mn)$ has a magnetic moment of 3.873 B.M. Then oxidation state of Mn in ion is :

A. 2

B. 3

C. 4

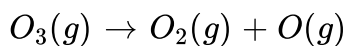
D. 5

Answer: C

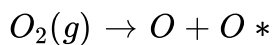
 [Watch Video Solution](#)

Level 3 Passage 4

1. Ozone in the upper atmosphere absorbs ultraviolet radiation which induces the following chemical reaction



O_2 produced in the above photochemical dissociation undergoes further dissociation into one normal oxygen atom (O) and more energetic oxygen atom O^* .



(O^*) has 1 eV more energy than(O) and normal dissociation energy of O_2 is 480 kJ mol^{-1} .

[1 eV/Photon = 96 kJ mol^{-1}]

What is the maximum wavelength effective for the photochemical dissociation of O_2 molecule

A. 2440 Å

B. 2066.67 Å

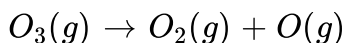
C. 1000 Å

D. 155 Å

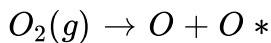
Answer: B

 **Watch Video Solution**

2. Ozone in the upper atmosphere absorbs ultraviolet radiation which induces the following chemical reaction



O_2 produced in the above photochemical dissociation undergoes further dissociation into one normal oxygen atom (O) and more energetic oxygen atom O^* .



(O^*) has 1 eV more energy than(O) and normal dissociation energy of O_2 is 480 kJ mol^{-1} .

[1 eV/Photon = 96 kJ mol^{-1}]

If dissociation of O_3 into O_2 and O requires 400 kJ mol^{-1} and O_2 produced in this reaction is further dissociated to O and O^* then the total energy required to for the dissociation of O_3 into O and O^* is :

A. 1168kJ/mol

B. 976kJ/mol

C. 880kJ/mol

D. None of these

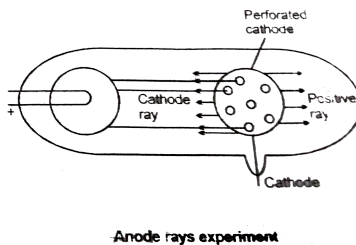
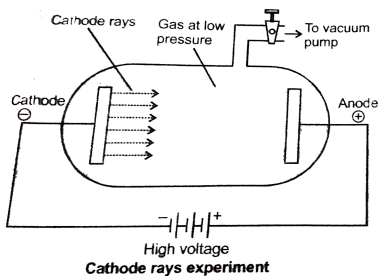
Answer: B



[Watch Video Solution](#)

Level 3 Passage 5

1. The existence of negatively charged particle in an atom was shown by J.J. Thomson as a result of the studies of the passage of electricity through gases at extremely low pressure known as discharge tube experiments. When a high voltage of the order of 10,000 volts or more was impressed across the electrodes, some sort of invisible rays moved from the negative electrode to the positive electrode these rays are called as cathode rays.



Cathode rays travel in straight path in absence of electrical and magnetic field . Cathode rays consist of material part and charged particles?

Cathode rays produce X-rays and light is emitted when they strike on ZnS screen. Cathode rays penetrate through thin sheets of aluminium and other metals . They affect the photogenic plate and passes heating effect when they strike on metal foil. The ratio of charge to mass i.e charge/mass is same for all the cathode rays irrespective of the gas used in the tube.

The existence of positively charged particle in an atom was shown by E. Goldstein. He repeated the same discharge tube experiments by using a perforated cathode. It was observed that when a high potential difference was applied between the electrodes, not only cathode rays were produced but also a new type of rays were produced simultaneously from anode moving towards cathode and passes through the holes or canal of the cathode. These termed as canal rays or anode rays.

These rays travel in straight lines and consists of positively charged particles. These rays have kinetic energy and produces heating effect also. The e/m ratio of these rays is smaller than that of electrons. Unlike cathode rays, their e/m value is dependent upon the nature of the gas taken in the tube. These rays produced flashes of light on ZnS screen and can pass through thin metal foils. They can produce physical and chemical changes and are capable to produce ionisation in gases.

For cathode rays the value of e/m :

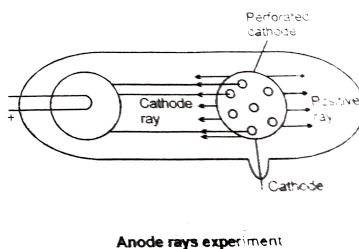
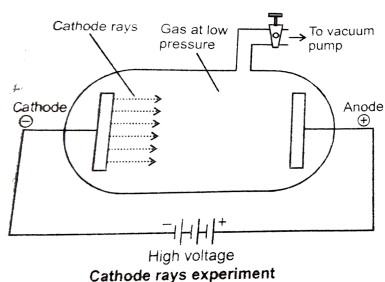
- A. is independent of the nature of the cathode and the gas filled in the discharge tube
- B. is constant
- C. is -1.7588×10^8 coulombs/g
- D. all of the above are correct

Answer: D



Watch Video Solution

2. The existence of negatively charged particle in an atom was shown by J.J. Thomson as a result of the studies of the passage of electricity through gases at extremely low pressure known as discharge tube experiments. When a high voltage of the order of 10,000 volts or more was impressed across the electrodes, some sort of invisible rays moved from the negative electrode to the positive electrode these rays are called as cathode rays.



Cathode rays travel in straight path in absence of electrical and magnetic field . Cathode rays consist of material part and charged particles? Cathode rays produce X-rays and light is emitted when they strike on ZnS screen. Cathode rays penetrate through thin sheets of aluminium and other metals . They affect the photogenic plate and passes heating effect when they strike on metal foil. The ratio of charge to mass i.e charge/mass is same for all the cathode rays irrespective of the gas used in the tube.

The existence of positively charged particle in an atom was shown by E. Goldstein. He repeated the same discharge tube experiments by using a perforated cathode. It was observed that when a high potential difference was applied between the electrodes, not only cathode rays were produced but also a new type of rays were produced simultaneously from anode moving towards cathode and passes through the holes or canal of the cathode. These termed as canal rays or anode rays.

These rays travel in straight lines and consists of positively charged particles. These rays have kinetic energy and produces heating effect also.

The e/m ratio of these rays is smaller than that of electrons. Unlike cathode rays, their e/m value is dependent upon the nature of the gas taken in the tube. These rays produced flashes of light on ZnS screen and can pass through thin metal foils. They can produce physical and chemical changes and are capable to produce ionisation in gases.

Which is not true with respect to cathode rays?

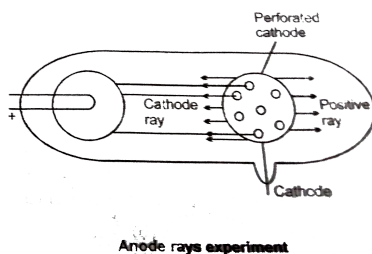
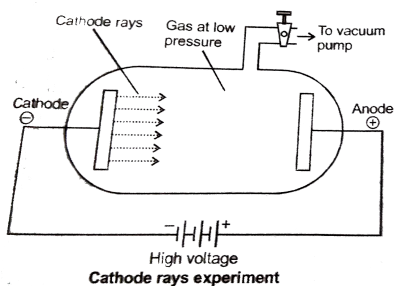
- A. A stream of electrons
- B. Charged particles
- C. Move with same speed as that of light

D. can be deflected by the electric field

Answer: C

 **Watch Video Solution**

3. The existence of negatively charged particle in an atom was shown by J.J. Thomson as a result of the studies of the passage of electricity through gases at extremely low pressure known as discharge tube experiments. When a high voltage of the order of 10,000 volts or more was impressed across the electrodes, some sort of invisible rays moved from the negative electrode to the positive electrode these rays are called as cathode rays.



Cathode rays travel in straight path in absence of electrical and magnetic field . Cathode rays consist of material part and charged particles?

Cathode rays produce X-rays and light is emitted when they strike on ZnS screen. Cathode rays penetrate through thin sheets of aluminium and other metals. They affect the photographic plate and produce heating effect when they strike on metal foil. The ratio of charge to mass i.e. e/m is same for all the cathode rays irrespective of the gas used in the tube.

The existence of positively charged particles in an atom was shown by E. Goldstein. He repeated the same discharge tube experiments by using a perforated cathode. It was observed that when a high potential difference was applied between the electrodes, not only cathode rays were produced but also a new type of rays were produced simultaneously from anode moving towards cathode and passing through the holes or canal of the cathode. These are termed as canal rays or anode rays.

These rays travel in straight lines and consist of positively charged particles. These rays have kinetic energy and produce heating effect also. The e/m ratio of these rays is smaller than that of electrons. Unlike cathode rays, their e/m value is dependent upon the nature of the gas taken in the tube. These rays produce flashes of light on ZnS screen and can pass through thin metal foils. They can produce physical and

chemical changes and are capable to produce ionisation in gases.

Select the incorrect statement.

- A. Cathode rays has charged only and no mass
- B. Anode rays are deflected by electrical and magnetic field
- C. Canal rays is named for beam of positive charged particle
- D. Anode rays particle carrying positive charge

Answer: A



[Watch Video Solution](#)

One Or More Answers Is Are Correct

1. Select the correct statements (s):

- A. The phenomena of diffraction of light can only be explained by assuming that light behaves as waves

B. de- Broglie postulate the dual character existed with matter

C. In atomic model Bohr considered electron as a particle

D. Wave nature of electrons was proved when diffraction rings were observed photographically when a stream of protons was passed through a metal foil

Answer: D



Watch Video Solution

Match The Column

1. Column-I and Column-II contains four entries each. Entries of Column-I are to be matched with some entries of Column-II One or more than one entries of Column-I may have the matching with the same entries of

Column-II.

	ColumnI		ColumnII
(A)	Electron	(P)	Negative charge
(B)	Proton	(Q)	Positive charge
(C)	Neutron	(R)	$1.6 \times 10^{-19}C$
(D)	Positron	(S)	Chargeless

 [Watch Video Solution](#)

Assertion Reason Type Questions

1. STATEMENT-1: The angular momentum of d-orbitals is $\sqrt{6} \frac{h}{2\pi}$

STATEMENT 2 : Angular momentum of electron in orbit is $mvr = \frac{nh}{2\pi}$

- A. If both the statement are TRUE and STATEMENT-2 is the correct explanation of STATEMENT-1
- B. If both the statements are TRUE but STATEMENT-2 is NOT the correct explanation of STATEMENT-1
- C. If STATEMENT-1 is TRUE and STATEMENT-2 is FALSE
- D. If STATEMENT-1 is FALSE and STATEMENT-2 is TRUE

Answer: B



Watch Video Solution

Subjective Problems

1. Given $r_{n+1} - r_{n-1} = 2r_n$, where $r_n - r_{n-1} = r_{n+1}$, are Bohr radius for hydrogen atom in n^{th} , $(n - 1)^{th}$ shell respectively. Calculate the value of n.



Watch Video Solution

Others

1. The angular momentum of electron can have the value (s) :

A. (a) $\frac{0.5h}{\pi}$

B. (b) $\frac{h}{\pi}$

C. (c) $\frac{h}{0.5\pi}$

D. (d) $\frac{2.5h}{2\pi}$

Answer: A,B,C



Watch Video Solution

2. Select incorrect statement (s) :

A. (a) Only three quantum numbers n , l and m are needed to define
and orbital

B. (b) Four quantum numbers are needed for complete discription of
an electron

C. (c) Two quantum numbers n and l are needed to identity subshell
and shape of orbital

D. (d) Splitting of spectrum lines in presence of electric field is known
as Zeeman effect

Answer: D



Watch Video Solution

3. Select the correct statement (s) :

- A. (a) An electron near the nucleus is attracted by the nucleus and has a low potential energy
- B. (b) According to Bohr's theory, an electron continuously radiate energy if it stays in one orbit
- C. (c) Bohr's model could not explain the spectra of multielectron atoms
- D. (d) Bohr's model was the first atomic model based on quantisation of energy

Answer: A,C,D



Watch Video Solution

4. Choose the correct statement (s) :

- A. The shape of an atomic orbital depends upon azimuthal quantum number
- B. The orientation of an atomic orbital depends upon the magnetic quantum number
- C. The energy of an electron in an atomic orbitals of multi-electron atom depends upon principle quantum number only
- D. The number of degenerate atomic orbitals of one type depends upon the value of azimuthal quantum number

Answer: A,C,D



[Watch Video Solution](#)

5. For radial probability curves. Which of the following is/are correct ?

- A. The number of maxima in $2s$ orbital are two
- B. The number of spherical or radial nodes is equal to $n - l - 1$
- C. The number of angular nodes are 'l'
- D. $3d_z^2$ has 3 angular nodes

Answer: A,B,C

 [Watch Video Solution](#)

6. Select the correct statement (s) :

- A. Lower value of quantum number l indicates that there is a higher probability of finding the $3s$ electron close to the nucleus than those of $3p$ and $3d$ orbitals
- B. Energy of $3s$ orbital is less than for the $3p$ and $3d$ orbitals
- C. At the node, the value of the radial function change from positive to negative

D. The radial function upon the quantum numbers n and l

Answer: A,B,D

 [Watch Video Solution](#)

7. Choose the incorrect statement (s) :

A. For a particular orbital in hydrogen atom, the wave function may have negative value

B. Radial probability distribution function may have zero value but can never have negative value

C. $3d_{x^2-y^2}$ orbital has two angular nodes and one radial node

D. yz and xz planes are nodal planes for d_{xy} orbital

Answer: C

 [Watch Video Solution](#)

8. Select the correct statement (s) :

- A. Heisenberg's principle is applicable to stationary electron
- B. Pauli's exclusion principle is not applicable to photons
- C. For an electron the product of velocity and principle quantum number will be independent to principle quantum number
- D. Quantum numbers l and m determine the value of angular wave function

Answer: B,C,D

 [Watch Video Solution](#)

9. Choose the correct statements among the following :

- A. A node is a point in space where the wave-function Ψ has zero amplitude

- B. The number of maxima (peaks) in radial probability distribution function is $(n-l)$
- C. Radial probability density is $4\pi r^2 R_{n,l}^2(r)$
- D. Ψ^2 represents probability of finding electron

Answer: A,B,C,D

 [Watch Video Solution](#)

10. Select the correct statement (s) regarding $3p_y$ orbital :

- A. Total number of nodes are 2
- B. Number of maxima in the curve $4\pi r^2 R^2$ vs r are two
- C. Quantum number n , l and m for an orbital may be 3, 1, -1 respectively
- D. The magnetic quantum number may have a positive value

Answer: A,B,C,D



Watch Video Solution

11. Select the correct statement (s) :

(a) In wave mechanical model, the energy of electron in the orbital remains constant

(b) d_{xy} orbital lies in yz plane

(c) Nodal planes are yz and xy in $d_{x^2-y^2}$ orbital

(d) Rest mass of photon is zero and increases with its velocity

A. In wave mechanical model, the energy of electron in the orbital remains constant

B. d_{xy} orbital lies in yz plane

C. Nodal planes are yz and xy in $d_{x^2-y^2}$ orbital

D. Rest mass of photon is zero and increases with its velocity

Answer: C,D



Watch Video Solution

12. Hydrogen has :

- A. (a) half filled subshell
- B. (b) half filled shell
- C. (c) one electron in valence shell
- D. (d) half filled orbital

Answer: A,B,C,D



[Watch Video Solution](#)

13. Select incorrect statement (s) :

- A. (a) If the value of $l = 0$, the electron distribution is spherical
- B. (b) The shape of the orbital is given by magnetic quantum number
- C. (c) Angular momentum of $1s$, $2s$, $3s$ orbit electrons are equal
- D. (d) In an atom, all the electrons travel with the same velocity

Answer: B,C,D



Watch Video Solution

14. The radial distribution function $[P(r)]$ is used to determine the most probable radius, which is used to find the electron in a given orbital. $\frac{dp(r)}{dr}$

for $1s$ -orbital of hydrogen like atom having atomic number Z , is

$$\frac{dp}{dr} = \frac{4Z^3}{a_0^3} \left(2r - \frac{2Zr^2}{a_0} \right) e^{-2Zr/a_0}$$

Then which of the following statements is/are correct ?

A. At the point of maximum value of radial distribution function

$$\frac{dp(r)}{dr} = 0, \text{ one antinode is present}$$

B. Most probable radius of Li^{2+} is $\frac{a_0}{3}$ pm

C. Most probable radius of He^+ is $\frac{a_0}{2}$ pm

D. Most probable radius of hydrogen atom is a_0 pm

Answer: A,B,C,D



Watch Video Solution

15. Select the correct statement (s) :

- A. (a) An orbital with $l=0$ is symmetrical about the nucleus
- B. (b) An orbital with $l = 1$ is spherically symmetrical about the nucleus
- C. (c) $3d_{z^2}$ is spherically symmetrical about the z-axis
- D. (d) All are correct

Answer: A,C



Watch Video Solution

16. Select the correct statement (s) :

- A. Radial function $[R(r)]$ is a part of wave function which depends upon quantum number n the nucleus

B. Angular function depends only on the direction, and is independent to the distance from the nucleus

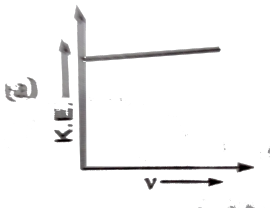
C. $\Psi^2(r, \theta, \Phi)$ is the probability density of finding the electron at a particular point in space

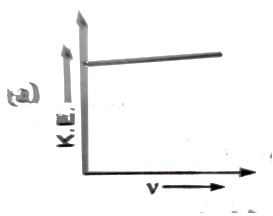
D. Radial distribution function ($4\pi r^2 R^2$) gives the probability of the electron being present at a distance r from the nucleus

Answer: B,C,D

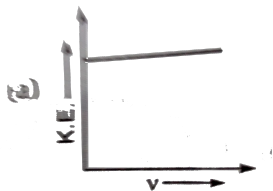
 [Watch Video Solution](#)

17. Which is/are correct graph ?

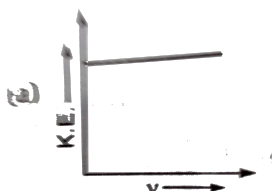




B.



C.



D.

Answer: A,B,C,D



Watch Video Solution

18. Draw correct curve for V vs $1/r$:

V = Velocity of electron in Bohr's orbit

r = Radius of electron in Bohr's orbit

$P. E.$ = Potential energy of electron in Bohr's orbit

$K. E.$ = Kinetic energy of electron in Bohr's orbit



Watch Video Solution

19. Select the correct set (s) of quantum numbers

A. (a) $n = 3, l = 0, m_l = -1$

B. (b) $n = 3, l = 3, m_l = -2$

C. (c) $n = 3, l = 2, m_l = -2$

D. (d) $n = 3, l = 1, m_l = 0$

Answer: C,D



Watch Video Solution

20. Which is /are correct statement ?

A. (a) Number of subshell present in M-shell = 3

B. (b) Number of orbitals present in N-shell = 16

C. (c) $Cu^+ (z = 29)$ is paramagnetic

D. (d) Zeeman effect explains splitting of

spectral lines in magnetic field.

Answer: A,B,D



[Watch Video Solution](#)

21. In a sample of H-atoms electrons are de-excited from 4^{th} excited state to ground state. Which is/are correct statement ?

A. (a) No line observed in P-fund series.

B. (b) Total ten lines observed in spectrum.

C. (c) 4 line in UV-region and 3 line in visible region observed.

D. (d) One line observed in Brackett series.

Answer: A,B,C,D



[Watch Video Solution](#)

22.

ColumnI	ColumnII
(A) Thomson model of atom	(P) Electrons are present in
(B) Rutherford model of atom	(Q) Electron in the atom is c
(C) Bohr model of atom	(R) Positive charge is accum
(D) Schrodinger model of hydrogen atom	(S) Uniform sphere of positi

 [Watch Video Solution](#)

23.

ColumnI	ColumnII
(A) Atomic theory of matter	(P) Rutherford scattering
(B) Quantization of charge	(Q) Muliken's oil drop exp
(C) Quantization of electronic energy level	(R) Atomic spectra
(D) Size of nucleus	(S) Law of multiple propor

 [Watch Video Solution](#)

ColumnI	ColumnII
(A) $\frac{K.E.}{P.E.}$	(P) 2
24. (B) $P.E + 2K.E.$	(Q) $-\frac{1}{2}$
(C) $\frac{P.E.}{T.E.}$	(R) 1
(D) $\frac{K.E.}{T.E.}$	(S) 0

 [Watch Video Solution](#)

- | | ColumnI | | ColumnII |
|-----|---------------------|-----|--------------------|
| | (A) Lyman series | (P) | Visible region |
| 25. | (B) Humphery series | (Q) | Ultraviolet region |
| | (C) Paschen series | (R) | Infrared region |
| | (D) Balmer series | (S) | Far infared region |

▶ Watch Video Solution

26. In case of hydrogen spectrum wave number is given by

$$\bar{\nu} = R_H \left[\frac{1}{n_1^2} - \frac{1}{n_2^2} \right] \text{ where } n_1 > n_2$$

- | | ColumnI | | ColumnII |
|-----|-----------------|-----|-----------|
| (A) | Lyman series | (P) | $n_2 = 2$ |
| (B) | Balmer series | (Q) | $n_2 = 3$ |
| (C) | Pfund series | (R) | $n_2 = 6$ |
| (D) | Brackett series | (S) | $n_2 = 5$ |

▶ Watch Video Solution

ColumnI(Shell) ColumnII(Value of l)

(A) 2nd (P) 1

27. (B) 3rd (Q) 2

(C) 4th (R) 3

(D) 1st (S) 0



Watch Video Solution

28. In Bohr's model, for a unielectronic atom, following symbols are used

$r_{n,z}$ → Potential energy n +th orbit with atomic number Z,

$U_{n,z}$ → Potential energy of electron, $K_{n,z}$ → Kinetic energy of electron,

$V_{n,z}$ → Velocity of electron, $T_{n,z}$ → Time period of revolution

ColumnI ColumnII

(A) $U_{1,2} : K_{1,1}$ (P) 1 : 8

(B) $r_{2,1} : r_{1,2}$ (Q) – 8 : 1

(C) $V_{1,3} : V_{3,1}$ (R) 9 : 1

(D) $T_{1,2} : T_{2,2}$ (S) 8 : 1



Watch Video Solution

29.

Column I

- | | |
|---|-----|
| (A) The radial node of 5s atomic orbital is | (P) |
| (B) The angular node of $3d_{yz}$ atomic orbital is | (Q) |
| (C) The sum of angular node and radial node of $4d_{xy}$ atomic orbital | (R) |
| (D) The angular node of 3p atomic orbital is | (S) |



Watch Video Solution

30.

Column I

Column II

- | | |
|---|--------------------|
| (A) The d-orbital which has two angular nodes | (P) $3d_{x^2-y^2}$ |
| (B) The d-orbital with two nodal surfaces from center | (Q) $3d_{s^2}$ |
| (C) The orbital without angular node | (R) $4f$ |
| (D) The orbital which has three angular nodes | (S) $3s$ |



Watch Video Solution

31.

ColumnI

- (A) Orbital angular momentum of an electron
(B) Angular momentum of an electron in an orbit
(C) Spin angular momentum of an electron
(D) Magnetic moment of atom

ColumnII

- (P) $\sqrt{s(s+1)} \frac{h}{2\pi}$
(Q) $\sqrt{n(n+2)}$
(R) $\frac{nh}{2\pi}$
(S) $\sqrt{l(l+1)} \frac{h}{2\pi}$



Watch Video Solution

32.

ColumnI

- (A) Number of orbitals in the n^{th} shell
(B) Maximum number of electrons in a subshell
(C) Number of subshell in n^{th} shell
(D) Number of orbitals in a subshell

ColumnII

- (P) $2(2l+1)$
(Q) n
(R) $2l+1$
(S) n^2



Watch Video Solution

33. Match the following columns

Column-I	Column-II
(A) Number of orbitals in the n^{th} shell	(P) $2(2l + 1)$
(B) Maximum number of electrons in a subshell	(Q) n
(C) Number of subshells in n^{th} shell	(R) $2l + 1$
(D) Number of orbitals in a subshell	(S) n^2

 Watch Video Solution

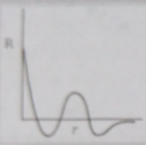
34. Match the following columns

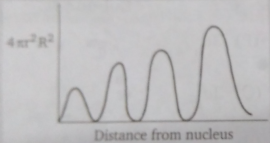
Column-I	Column-II
(A) $2s$	(P) $n = 4, l = 2, m = 0$
(B) $2p_z$	(Q) $n = 4, l = 2, m = -2 \text{ or } +2$
(C) $4d_{x^2-y^2}$	(R) $n = 2, l = 1, m = 0$
(D) $4d_{z^2}$	(S) $n = 2, l = 0, m = 0$

 Watch Video Solution

35. Match the following columns

Column-I

(A) 

(B) 

(C) Angular probability depends upon θ and ϕ

(D) At least one angular node is present

Column-II

(P) $4s$

(Q) $5p_y$

(R) $3s$

(S) $6d_{xy}$

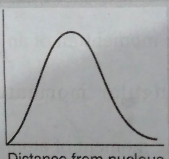
[▶ Watch Video Solution](#)

36. Match the following columns

Column-I

(A) $3s$

Column-II

(P) 

[▶ Watch Video Solution](#)

37. STATEMENT-1: Angular momentum of the electron in the orbit which has four subshells $\frac{2h}{\pi}$

STATEMENT-2: Angular momentum of electron is quantized.

- A. If both the statement are TRUE and STATEMENT-2 is the correct explanation of STATEMENT-1
- B. If both the statements are TRUE but STATEMENT-2 is NOT the correct explanation of STATEMENT-1
- C. If STATEMENT-1 is TRUE and STATEMENT-2 is FALSE
- D. If STATEMENT-1 is FALSE and STATEMENT-2 is TRUE

Answer: A



[Watch Video Solution](#)

38. STATEMENT-1: Line emission spectra useful in the study of atomic structure.

STATEMENT-2: Each element has a unique line emission spectrum.

- A. If both the statements are TRUE and STATEMENT-2 is the correct explanation of STATEMENT-1
- B. If both the statements are TRUE but STATEMENT-2 is NOT the correct explanation of STATEMENT-1
- C. If STATEMENT-1 is TRUE and STATEMENT-2 is FALSE
- D. If STATEMENT-1 is FALSE and STATEMENT-2 is TRUE

Answer: A

 [Watch Video Solution](#)

39. STATEMENT-1: Emitted radiation will fall in visible range when an electron jumps from $n = 4 \rightarrow n = 2$ H-atom.

STATEMENT-2: Balmer series radiations belong to visible for hydrogen atom only.

- A. If both the statements are TRUE and STATEMENT-2 is the correct explanation of STATEMENT-1

B. If both the statements are TRUE but STATEMENT-2 is NOT the correct explanation of STATEMENT-1

C. If STATEMENT-1 is TRUE and STATEMENT-2 is FALSE

D. If STATEMENT-1 is FALSE and STATEMENT-2 is TRUE

Answer: A

 [Watch Video Solution](#)

40. STATEMENT-1: Half-filled and fully-filled degenerate orbitals are more stable.

STATEMENT-2: Extra stability is due to the symmetrical distribution of electrons and exchange energy.

A. If both the statements are TRUE and STATEMENT-2 is the correct explanation of STATEMENT-1

B. If both the statements are TRUE but STATEMENT-2 is NOT the correct explanation of STATEMENT-1

C. If STATEMENT-1 is TRUE and STATEMENT-2 is FALSE

D. If STATEMENT-1 is FALSE and STATEMENT-2 is TRUE

Answer: A

 [Watch Video Solution](#)

41. Statement-I : The ground state configuration of Cr is $3d^5 4s^1$.

Because

Statement-II : A set of exactly half filled orbitals containing parallel spin arrangement provide extra stability.

A. If both the statement are TRUE and STATEMENT-2 is the correct explanation of STATEMENT-1

B. If both the statements are TRUE but STATEMENT-2 is NOT the correct explanation of STATEMENT-1

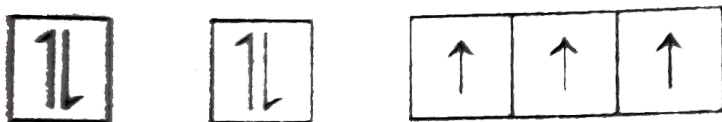
C. If STATEMENT-1 is TRUE and STATEMENT-2 is FALSE

D. If STATEMENT-1 is FALSE and STATEMENT-2 is TRUE

Answer: A

 Watch Video Solution

42. STATEMENT-1: The ground state electronic configuration of nitrogen is



STATEMENT-2:

Electronic are filled in orbitals as per aufbau principle, Hund's rule of maximum spin multiplicity and pauli's principle.

- A. If both the statement are TRUE and STATEMENT-2 is the correct explanation of STATEMENT-1
- B. If both the statements are TRUE but STATEMENT-2 is NOT the correct explanation of STATEMENT-1
- C. If STATEMENT-1 is TRUE and STATEMENT-2 is FALSE
- D. If STATEMENT-1 is FALSE and STATEMENT-2 is TRUE

Answer: A

 [Watch Video Solution](#)

43. STATEMENT-1: An orbital cannot have more than two electrons and they must have opposite spins.

STATEMENT-2: No two electrons in an atom can have same set of all the four quantum numbers as per Pauli's exclusion principle.

- A. If both the statements are TRUE and STATEMENT-2 is the correct explanation of STATEMENT-1
- B. If both the statements are TRUE but STATEMENT-2 is NOT the correct explanation of STATEMENT-1
- C. If STATEMENT-1 is TRUE and STATEMENT-2 is FALSE
- D. If STATEMENT-1 is FALSE and STATEMENT-2 is TRUE

Answer: A

 [Watch Video Solution](#)

44. STATEMENT-1: Orbital having xz plane as node may be $3d_{xy}$

STATEMENT-2: $3d_{xy}$ has zero radial node.

- A. If both the statement are TRUE and STATEMENT-2 is the correct explanation of STATEMENT-1
- B. If both the statements are TRUE but STATEMENT-2 is NOT the correct explanation of STATEMENT-1
- C. If STATEMENT-1 is TRUE and STATEMENT-2 is FALSE
- D. If STATEMENT-1 is FALSE and STATEMENT-2 is TRUE

Answer: B

 [Watch Video Solution](#)

45. STATEMENT-1: The kinetic energy of photo-electrons increases with increase in frequency of incident light were $\nu > \nu_0$.

STATEMENT-2: Whenever intensity of light is increased the number of photo-electron ejected always increases.

- A. If both the statement are TRUE and STATEMENT-2 is the correct explanation of STATEMENT-1
- B. If both the statements are TRUE but STATEMENT-2 is NOT the correct explanation of STATEMENT-1
- C. If STATEMENT-1 is TRUE and STATEMENT-2 is FALSE
- D. If STATEMENT-1 is FALSE and STATEMENT-2 is TRUE

Answer: C

 [Watch Video Solution](#)

46. Assertion : Cu^{2+} ion is a coloured ion .

Reason : Every ion with unpaired electron is coloured .

- A. If assertion and reason are TRUE and reason is the correct explanation of STATEMENT-1
- B. If assertion and reason are TRUE but reason is NOT the correct explanation of STATEMENT-1
- C. If assertion is TRUE and reason is FALSE
- D. If assertion is FALSE and reason is TRUE

Answer: C



Watch Video Solution

47. STATEMENT-1: For $n = 3$ l may be 0, 1 and 2 and m may be 0, 0 ± 1 , 0 ± 1 and ± 2

STATEMENT-2: For each value of n , there are 0 to $0(n - 1)$ possible values of l , and for each value of l , there are 0 to $\pm l$, values of m .

- A. If both the statement are TRUE and STATEMENT-2 is the correct explanation of STATEMENT-1

- B. If both the statements are TRUE but STATEMENT-2 is NOT the correct explanation of STATEMENT-1
- C. If STATEMENT-1 is TRUE and STATEMENT-2 is FALSE
- D. If STATEMENT-1 is FALSE and STATEMENT-2 is TRUE

Answer: A

 [Watch Video Solution](#)

48. The energy of separation of an electron is 30.6eV moving in an orbit of Li^{+2} . Find out the number of waves made by the electron in one complete revolution in the orbit

 [Watch Video Solution](#)

49. Calculate the number of waves made by a Bohr electron in one complete revolution in n^{th} orbit of H-atom, if ratio of de-Broglie

wavelength associated with electron moving in n^{th} orbit and 2^{nd} orbit is 1.5.

 [Watch Video Solution](#)

50. A certain day absorbs lights of $\lambda = 400 \text{ nm}$ and then fluorescence light of wavelength 500 nm . Assuming that under given condition 40 % of the absorbed energy is re-emitted as fluorescence, calculate the ratio of quanta observed to number of quanta emitted out.

 [Watch Video Solution](#)

51. A photon of energy 4.5 eV strikes on a metal surface of work function 3.0 eV . If uncertainty in position is $\frac{25}{4\pi} \text{ \AA}$, find the uncertainty in measurement of deBroglie wavelength (in \AA).

 [Watch Video Solution](#)

52. Find out the difference in number of angular nodes and number of radial nodes in the orbital to which last electron of chromium present.

 [Watch Video Solution](#)

53. What is the total number of radial and angular nodes present in 5f orbital ?

 [Watch Video Solution](#)

54. Infrared lamps are used in restaurants to keep the food warm. The infrared radiation is strongly absorbed by water, raising its temperature and that of the food. If the wavelength of infrared radiation is assumed to be 1500 nm, and the number of quanta of infrared radiation produced per second by an infrared lamp (that consumes energy at the rate of 100 W and is 12 % efficient only) is $(x \times 10^{19})$, then the value of x is :

(Given: $h = 6.665 \times 10^{-34} \text{ J - s}$)

 [Watch Video Solution](#)

55. When an electron makes transition from $(n + 1)$ state to n state the wavelength of emitted radiations is related to n ($n \gg 1$) according to $\lambda \propto n^x$.

What is the value of x ?

 Watch Video Solution

56. For $3s$ orbital of hydrogen atom, the normalised wave function is

$$\Psi_{3s} = \frac{1}{(81)\sqrt{3\pi}} \left(\frac{1}{a_0} \right)^{3/2} \left[27 - \frac{18r}{a_0} + \frac{2r^2}{a_0^2} \right] e^{-\frac{r}{3a_0}}$$

If distance between the radial nodes is d , calculate the value of $\frac{d}{1.73a_0}$

 Watch Video Solution

57. Find the separation between two electron (in Å) in vacuum, if electrostatic potential energy between these electrons in

$$7.67 \times 10^{-19} \text{ J}.$$

$$[\text{Given: } e = 1.6 \times 10^{-19} \text{ C } \epsilon_0 = 8.85 \times 10^{-12} \text{ J}^{-1} \text{ C}^2 \text{ m}^{-1} \pi = 3.14]$$

 [Watch Video Solution](#)

58. An α - particle moving with velocity $\frac{1}{30}$ th times of velocity of light.

If uncertainty in position is $\frac{3.31}{\pi}$ pm, then minimum uncertainty in

kinetic energy is $y \times 10^{-16}$ J. Calculate the value of y .

 [Watch Video Solution](#)

59. In a sample of excited hydrogen atoms electrons make transition from

$n = 2$ to $n = 1$. Emitted quanta strikes on a metal of work function

4.2eV. Calculate the wavelength(in Å) associated with ejected electrons

having maximum kinetic energy.

 [Watch Video Solution](#)

60. For 1s orbital of Hydrogen atom radial wave function is given as :



[Watch Video Solution](#)

61. Calculate the value of A.

$A = \frac{E_{1,2}}{2E_{2,1}}$ where E_{nz} = Energy of electron in n^{th} orbit, Z = atomic number of hydrogen like species.



[Watch Video Solution](#)