

MATHS

BOOKS - SAI MATHS (TELUGU ENGLISH)

EAMCET -2016 (TS)

Mathematics

1. If $f(x) = x^2 - 2x + 4$ then the set of values of x satisfying

$$f(x - 1) = f(x + 1) \text{ is}$$

A. $\{-1\}$

B. $\{-1, 1\}$

C. $\{1\}$

D. $\{1, 2\}$

Answer: C



Watch Video Solution

2. The number of real linear functions $f(x)$ satisfying

$$f(f(x)) = x + f(x) \text{ is}$$

A. 0

B. 4

C. 5

D. 2

Answer: D



View Text Solution

3. The remainder when $7^n - 6n - 50 (n \in \mathbb{N})$ is divided by 36, is

A. 22

B. 23

C. 1

D. 21

Answer: B



[View Text Solution](#)

4. Consider the system of equations

$$ax + by + cz = 2$$

$$bx + cy + az = 2$$

$$cx + ay + bz = 2$$

Where a, b, c are real number such that $a + b + c = 0$ Then the system

- A. has two solutions
- B. in inconsistant
- C. has unique solutions
- D. has infinitely many solutions

Answer: B



[View Text Solution](#)

5. Suppose A and B are two square matrices of same order. If A, B are symmetric matrices, then $AB - BA$ is

- A. a symmetric matrix

B. a skew symmetric

C. a scalar matrix

D. a triangular matrix

Answer: B



Watch Video Solution

6. If $A(x) = \begin{vmatrix} x + 1 & 2x + 1 & 3x + 1 \\ 2x + 1 & 3x + 1 & x + 1 \\ 3x + 1 & x + 1 & 2x + 1 \end{vmatrix}$ then $\int_0^1 A(x) dx =$

A. 15

B. $\frac{-15}{2}$

C. -30

D. -5

Answer: B



View Text Solution

7. If $z = x + iy$ is a complex number such that $z^{1/3} = a + ib$, then the value of $\frac{1}{a^2 + b^2} \left(\frac{x}{a} + \frac{y}{b} \right) =$

A. -1

B. -2

C. 0

D. 2

Answer: B



View Text Solution

8. The locus of z , satisfying $|z| + |z - 1| = 3$ is

- A. a circle
- B. a pair of straight lines
- C. an ellipse
- D. a parabola

Answer: C



[View Text Solution](#)

9. If the point $z = (1 + i)(1 + 2i)(1 + 3i) \dots (1 + 10i)$ lies on a circle

- A. $10!$
- B. $2 \times 3 \times 4 \times \dots \times 10$

C. $2 \times 5 \times 10 \times \dots \times 101$

D. $11!$

Answer: C



[View Text Solution](#)

10. The minimum value of $|z - 1| + |z - 5|$ is

A. 5

B. 4

C. 3

D. 2

Answer: B



[View Text Solution](#)

11. The number of real roots of $|x^2| - 5|x| + 6 = 0$ is

A. 2

B. 3

C. 4

D. 1

Answer: C



Watch Video Solution

12. If α, β are the roots of $x^2 - x + 1 = 0$ then the quadratic equation whose roots are $\alpha^{2015}, \beta^{2015}$ is

A. $x^2 - x + 1 = 0$

B. $x^2 + x + 1 = 0$

C. $x^2 + x - 1 = 0$

D. $x^2 - x - 1 = 0$

Answer: A



[View Text Solution](#)

13. If α, β, γ are roots of $x^3 - 5x + 4 = 0$ then the quadratic equation whose roots are $\alpha^{2015}, \beta^{2015}$ is

A. 12

B. 13

C. 169

D. 144

Answer: D



View Text Solution

14. Suppose α, β, γ are roots $x^3 + x^2 + 2x + 3 = 0$. If $f(x) = 0$ is a cubic polynomial equation whose roots are $\alpha + \beta, \beta + \gamma, \gamma + \alpha$ then $f(x) =$

A. $x^3 + 2x^2 - 3x - 1$

B. $x^3 + 2x^2 - 3x + 1$

C. $x^3 + 2x^2 + 3x - 1$

D. $x^3 + 2x^2 + 3x + 1$

Answer: C



View Text Solution

15. The number of 4 letter words that can be formed with the letters in the word EQUATION with at least one letter repeated is

A. 2400

B. 2408

C. 2416

D. 2432

Answer: C



[Watch Video Solution](#)

16. The number of divisors of $7!$ is

A. 24

B. 72

C. 64

D. 60

Answer: D



Watch Video Solution

17. The sum of the series

$$1 + \frac{2}{3} \left(\frac{1}{8} \right) + \frac{2 \times 5}{3 \times 6} \left(\frac{1}{8} \right)^2 + \frac{2 \times 5 \times 8}{3 \times 6 \times 9} \left(\frac{1}{8} \right)^2 + \dots$$

is

A. $\frac{4}{3\sqrt{49}}$

B. $\frac{3\sqrt{49}}{4}$

C. $\frac{4}{3\sqrt{81}}$

D. $\frac{3\sqrt{81}}{4}$

Answer: A



View Text Solution

18. If C denotes the binomial coefficient ${}^n C_r$ then

$$(-1)C_0^2 + 2C_1^2 + 5C_2^2 + \dots + (3n - 1)C_n^2 =$$

A. $(3n - 2)2nC_n$

B. $\left(\frac{3n - n}{2}\right)2nC_n$

C. $(5 + 3n)2nC_n$

D. $\left(\frac{3n - 5}{2}\right)2nC_n$

Answer: B



View Text Solution

19.

$$\frac{x+1}{x^4(x+2)} = \frac{A}{x} + \frac{B}{x^2} + \frac{C}{x^3} + \frac{D}{x^4} + \frac{E}{x+2} \Rightarrow B + D + E =$$

A. $A + C$

B. $A - C$

C. $2A + C$

D. $2A + 2C$

Answer: A



Watch Video Solution

20. If $\cos^3 \theta + \cos^3 \left(\frac{2\pi}{3} + \theta \right) + \cos^3 \left(\frac{4\pi}{3} + \theta \right) = a \cos 3\theta$,

then $a =$

A. $\frac{1}{4}$

B. $\frac{3}{4}$

C. $\frac{5}{4}$

D. $\frac{7}{4}$

Answer: B



Watch Video Solution

21.
$$\frac{\cos 13^\circ - \sin 13^\circ}{\cos 13^\circ + \sin 13^\circ} + \frac{1}{\cot 148^\circ} =$$

A. 1

B. -1

C. 0

D. $\frac{1}{2}$

Answer: C



View Text Solution

22. If $\cos x + \cos y + \cos \alpha = 0$ and $\sin x + \sin y + \sin \alpha = 0$,

then $\cot\left(\frac{x+y}{2}\right) =$

A. $\sin \alpha$

B. $\cos \alpha$

C. $\tan \alpha$

D. $\cot \alpha$

Answer: D



Watch Video Solution

23. If $f(x) = \cos^2 x + \cos^2 2x + \cos^2 3x$, then the number of values of $x \in [0, 2\pi]$ for which $f(x) = 1$ is `

A. 4

B. 6

C. 8

D. 10

Answer: D



[View Text Solution](#)

24. The value of x which satisfies

$$\sin(\cot^{-1} x) = \cos(\tan^{-1} + (1 + x))$$

A. $-\frac{1}{2}$

B. $\frac{1}{2}$

C. -1

D. 1

Answer: A



Watch Video Solution

25. For $\theta \in \left(0, \frac{\pi}{2}\right)$, $\operatorname{sech}^{-1}(\cos \theta) =$

A. $\log \left| \tan \left(\frac{\pi}{6} + \frac{\theta}{2} \right) \right|$

B. $\log \left| \tan \left(\frac{\pi}{3} + \frac{\theta}{2} \right) \right|$

C. $\log \left| \tan \left(\frac{\pi}{4} + \frac{\theta}{2} \right) \right|$

D. $\log \left| \tan \left(\frac{\pi}{4} - \frac{\theta}{2} \right) \right|$

Answer: C



[View Text Solution](#)

26. If $\triangle ABC$ is such that $\angle A = 90^\circ$, $\angle B \neq \angle C$, then

$$\frac{b^2 + c^2}{b^2 - c^2} \sin(B - C) = .$$

A. $\frac{1}{3}$

B. $\frac{1}{2}$

C. 1

D. $\frac{3}{2}$

Answer: C



[View Text Solution](#)

27. In $\triangle ABC$, if $a^2 + b^2 + c^2 = 8R^2$, then the triangle is

- A. right angled triangle
- B. equilateral triangle
- C. scalence triangle
- D. obtuse angled triangle

Answer: A



Watch Video Solution

28. In $\triangle ABC$, is $2R + r = r_2$ then $\angle B =$

- A. $\frac{\pi}{3}$
- B. $\frac{\pi}{4}$
- C. $\frac{\pi}{6}$
- D. $\frac{\pi}{2}$

Answer: D



View Text Solution

29. $\Delta ABCFEF$ is a regular hexagon whose centre is O. Then

$$\overline{AB} + \overline{AC} + \overline{AD} + \overline{AE} + \overline{AF} =$$

A. $2\overline{AO}$

B. $3\overline{AO}$

C. $5\overline{AO}$

D. $6\overline{AO}$

Answer: D



View Text Solution

30. ABCD is a parallelogram and P is the mid point of the side AD. The line BP meets the diagonal AC in Q. Then the ratio $AQ:QC=$.

A. 1:2

B. 2:1

C. 1:3

D. 3:1

Answer: A



[View Text Solution](#)

31. The vectors

$$\overline{2i} - \overline{3j} + \overline{k}, \overline{i} - \overline{2j} + \overline{3k}, \overline{3i} + \overline{j} - \overline{2k}$$

A. are linearly dependent

B. are linearly independent

C. form sides of a triangle

D. are coplanar

Answer: B



[View Text Solution](#)

32. \bar{a} , \bar{b} , \bar{c} are three vectors such that $|\bar{a}| = 1$, $|\bar{b}| = 2$, $|\bar{c}| = 3$ and \bar{b} , \bar{c} are perpendicular. If projection of \bar{b} on \bar{a} is the same as the projection of \bar{c} on \bar{a} , then $|\bar{a} - \bar{b} + \bar{c}| =$

A. $\sqrt{2}$

B. $\sqrt{7}$

C. $\sqrt{14}$

D. $\sqrt{21}$

Answer: C



View Text Solution

33. If $\bar{a}, \bar{b}, \bar{c}$ are unit vectors satisfying the relation

$\bar{a} + \bar{b} + \sqrt{3}\bar{c} = 0$, then the angle between \bar{a} and \bar{b} is

A. $\frac{\pi}{6}$

B. $\frac{\pi}{4}$

C. $\frac{\pi}{3}$

D. $\frac{\pi}{2}$

Answer: C



View Text Solution

34. \vec{a} is perpendicular to both \vec{b} and \vec{c} . The angle between \vec{b} and \vec{c} is $\frac{2\pi}{3}$. If $|\vec{a}| = 2$, $|\vec{b}| = 3$, $|\vec{c}| = 4$, then $\vec{c} \cdot (\vec{a} \times \vec{b}) =$

A. $18\sqrt{3}$

B. $12\sqrt{3}$

C. $8\sqrt{3}$

D. $6\sqrt{3}$

Answer: B



[View Text Solution](#)

35. If the average of the first n numbers in the sequence 148, 146, 144,....., is 125, then $n =$

A. 18

B. 25

C. 30

D. 36

Answer: B



Watch Video Solution

36. The standard deviation of $a, a + d, a + 2d, \dots, a + 2nd$ is

A. nd

B. n^2d

C. $\sqrt{\frac{n(n+1)}{3}}d$

$$D. \sqrt{\frac{n(n+3)}{3}}d$$

Answer: C



[View Text Solution](#)

37. Two events A and B are such that

$P(A) = \frac{1}{4}$, $P(A | B) = \frac{1}{4}$ and $P(B | A) = \frac{1}{2}$ Consider the

following statements :

(I) $P(\bar{A} | \bar{B}) = \frac{3}{4}$

(II) A and B are mutually exclusive

(III) $P(A | B) + P(A | \bar{B}) = 1$

Then

A. Only (I) is correct.

B. Only (I) and (II) are correct.

C. Only (I) and (III) are correct.

D. Only (II) and (III) are correct.

Answer: A



[View Text Solution](#)

38. A five digit number is formed by the digits 1,2,3,4, 5 with no digit being repeated. The probability that the number is divisible by 4, is

A. $\frac{1}{5}$

B. $\frac{2}{5}$

C. $\frac{3}{5}$

D. $\frac{4}{5}$

Answer: A



[View Text Solution](#)

39. When a pair of six faced fair dice are thrown, the probability that the sum of the numbers on the two dice is greater than 7, is

A. $\frac{1}{3}$

B. $\frac{5}{12}$

C. $\frac{1}{2}$

D. $\frac{1}{4}$

Answer: B



[View Text Solution](#)

40. In a family with 4 children, the probability that there are at least two girls is

A. $\frac{1}{2}$

B. $\frac{9}{16}$

C. $\frac{3}{4}$

D. $\frac{11}{16}$

Answer: D



[View Text Solution](#)

41. If on an average, out of 10 ships, one is drowned, then what is the probability that out of 5 ships atleast 4 reach safely ?

A. $14(0.9)^5$

B. $1.4(0.9)^5$

C. $0.14(0.9)^4$

D. $1.4(0.0)^4$

Answer: D



Watch Video Solution

42. If $A(5, -4)$ and $B(7, 6)$ are points in a plane, then the set of all points $P(x,y)$ in the plane such that $AP:PB = 2:3$ is

.

A. a circle

B. a hyperbola

C. an ellipse

D. a parabola

Answer: A



[View Text Solution](#)

43. If the axes are rotated anticlockwise through an angle 90° then the equation $x^2 = 4ay$ is changed to the equation

A. $y^2 = 4ax$

B. $x^2 = -4ay$

C. $y^2 = 4ax$

D. $x^2 = 4ay$

Answer: A



[View Text Solution](#)

44. The combined equation of the straight lines of the form $y = kx + 1$ (where k is an integer) such that the point of intersection of each with the line $3x + 4y = 9$ has an integer as its x - coordinate is

A. $(y + x + 1)(y + 2x - 1) = 0$

B. $(y + x - 1)(y + 2x + 1) = 0$

C. $(y + x + 1)(y + 2x + 1) = 0$

D. $(y + x - 1)(y + 2x - 1) = 0$

Answer: D



[View Text Solution](#)

45. A value of k such that the straight lines $y - 3kx + 4 = 0$ and $(2k - 1)x - (8k - 1)y - 6 = 0$ are perpendicular is

A. $\frac{1}{6}$

B. $-\frac{1}{6}$

C. 1

D. 0

Answer: A



[View Text Solution](#)

46. The length of the segment of the straight line passing through $(3,3)$ and $(7,6)$ cut off by the coordinate axes is

A. $\frac{4}{5}$

B. $\frac{5}{4}$

C. $\frac{7}{4}$

D. $\frac{4}{7}$

Answer: B



View Text Solution

47. The equation of the pair of straight lines through the point (1,1) and perpendicular to the pair of straight lines

$$3x^2 - 8xy + 5y^2 = 0 \text{ is}$$

A. $5x^2 + 8xy + 3y^2 - 14x - 18y + 16 = 0$

B. $5x^2 + 8xy + 3y^2 - 18x - 14y + 16 = 0$

C. $5x^2 - 8xy + 3y^2 - 18x - 14y + 32 = 0$

$$D. 5x^2 - 8xy + 3y^2 - 14x - 18 + 32 = 0$$

Answer: B



[View Text Solution](#)

48. The combined equation of the three sides of a triangle is $(x^2 - y^2)(2x + 3y - 6) = 0$. If the point $(0, \alpha)$ lies in the interior of this triangle then

A. $-2 < \alpha < 0$

B. $-2 < \alpha < 2$

C. $0 < \alpha < 2$

D. $\alpha \geq 2$.

Answer: C

[View Text Solution](#)

49. The point where the line $4x - 3y + 7 = 0$ touches the circle $x^2 + y^2 - 6x + 4y - 12 = 0$ is

A. $(1, 1)$

B. $(1, -1)$

C. $(-1, 1)$

D. $(-1, -1)$

Answer: C

[View Text Solution](#)

50. The normal to the circle given by $x^2 + y^2 - 6x + 8y - 144 = 0$ at $(8,0)$ meets the circle again at

the point

A. $(2, -16)$

B. $(2, 16)$

C. $(-2, 16)$

D. $(-2, -16)$

Answer: D



[View Text Solution](#)

51. For all real value of k , the polar of the point $(2k, k - 4)$ with respect to $x^2 + y^2 - 4x - 6y + 1 = 0$ passes through the point

A. $(1,1)$

B. (1,-1)

C. (-3,1)

D. (3,1)

Answer: D



[View Text Solution](#)

52. If the circles $x^2 + y^2 - 2\lambda x - 2y - 7 = 0$ and $3(x^2 + y^2) - 8x + 29y = 0$ are orthogonal then $\lambda =$

A. 4

B. 3

C. 2

D. 1

Answer: D



View Text Solution

53. The radical centre of the circles

$x^2 + y^2 = 1$, $x^2 + y^2 - 2x - 3 = 0$ and

$x^2 + y^2 - 2y - 3 = 0$ is

A. (1,1)

B. (1,-1)

C. (-1,1)

D. (-1,-1)

Answer: D



View Text Solution

54. From a point $(C,0)$ three normals are drawn to the parabola $y^2 = x$. Then

A. $C < \frac{1}{2}$

B. $C = \frac{1}{2}$

C. $C > \frac{1}{2}$

D. $\frac{1}{2} > C > \frac{1}{4}$

Answer: C



[View Text Solution](#)

55. The point of intersection of the parabolas $y^2 = 5x$ and $x^2 = 5y$ lie on the line

A. $x + y = 10$

B. $x - 2y = 0$

C. $x - y = 0$

D. $2x - y = 0$

Answer: C



View Text Solution

56. If S and S' are the foci of the ellipse $\frac{x^2}{25} + \frac{y^2}{16} = 1$ and if PSP' is a focal chord with $SP = 8$ then $SS' =$

A. $4 + S'P$

B. $S'P - 1$

C. $4 + SP$

D. $SP - 1$

Answer: A



View Text Solution

57. Let $A(2 \sec \theta, 3 \tan \theta)$ and $B(2 \sec \phi, 3 \tan \phi)$ where $\theta + \phi = \frac{\pi}{2}$, be two points on the hyperbola $\frac{x^2}{4} - \frac{y^2}{9} = 1$. If (α, β) is the point of intersection of normals to the hyperbola at A and B, then $\beta =$

A. $\frac{-13}{3}$

B. $\frac{13}{3}$

C. $\frac{3}{13}$

D. $\frac{-3}{13}$

Answer: A



View Text Solution

58. Point $A(3, 2, 4)$, $B\left(\frac{33}{5}, \frac{28}{5}, \frac{38}{5}\right)$, and $(9, 8, 10)$ are given.

The ratio in which B divides \overline{AC} is

A. 5 : 3

B. 2 : 1

C. 1 : 3

D. 3 : 2

Answer: D



[View Text Solution](#)

59. If the angle between the lines whose direction cosines are

$-\frac{2}{\sqrt{21}}, \frac{C}{\sqrt{21}}, \frac{1}{\sqrt{21}}$ and $\frac{3}{\sqrt{54}}, \frac{3}{\sqrt{54}}, \frac{6}{\sqrt{54}}$ is $\frac{\pi}{2}$, then the

value of C is

A. 6

B. 4

C. -4

D. 2

Answer: B



[View Text Solution](#)

60. The image of the point (5,2,6) with respect to the plane

$$x + y + z = 9 \text{ is}$$

A. (3, -5, 2)

B. $\left(\frac{7}{2}, -1, 5\right)$

C. $\left(\frac{7}{3}, -\frac{2}{3}, \frac{10}{3}\right)$

D. $\left(\frac{7}{3}, \frac{2}{3}, -\frac{5}{3}\right)$.

Answer: C



[View Text Solution](#)

61. $\lim_{x \rightarrow \infty} \left[\frac{x^2 + x + 3}{x^2 - x + 2} \right]^x =$

A. ∞

B. c

C. e^4

D. e^2

Answer: D



[View Text Solution](#)

62. The values of p and q so that the function

$$f(x) = \begin{cases} (1 + |\sin x|) \frac{p}{\sin x}, & \frac{\pi}{6} < x < 0 \\ q, & x = 0 \\ e^{\frac{\sin 2x}{\sin 3x}}, & 0 < x < \frac{\pi}{6} \end{cases} \text{ is continuous at}$$

$x = 0$ is

A. $p = \frac{1}{3}, q = e^{2/3}$

B. $p = 0, q = e^{2/3}$

C. $p = \frac{2}{3}, q = e^{2/3}$

D. $p = -\frac{2}{3}, q = e^{2/3}$

Answer: D



View Text Solution

63. If $y = \tan^{-1} \left[\frac{5 \cos x - 12 \sin x}{12 \cos x + 5 \sin x} \right]$, then $\frac{dy}{dx} =$

A. 1

B. -1

C. -2

D. $\frac{1}{2}$

Answer: B



[View Text Solution](#)

64. $\frac{d}{dx} y = \tan^{-1} \left[\frac{\sqrt{1 + \sin x} - \sqrt{1 - \sin x}}{\sqrt{1 + \sin x} + (\sqrt{1 - \sin x})} \right] =$

A. 1

B. $-\frac{1}{2}$

C. $\frac{1}{2}$

D. -1

Answer: C



View Text Solution

65. If $y = a \cos(\sin 2x) + b \sin(\sin 2x)$, then $y^n + (2 \tan 2x)y =$

A. 0

B. $4(\cos^2 2x)y$

C. $-4(\cos^2 2x)y$

D. $(\cos^2 2x)y$

Answer: C



[View Text Solution](#)

66. The length of the segment of the tangent line to the curve $x = a \cos^3 t, y = a \sin^3 t$, at any point on the curve cut off by the coordinate axes is

A. $4a$

B. a

C. a^2

D. $2a$

Answer: B



[View Text Solution](#)

67. The area of the triangle formed by the positive x -axis, the tangent and normal to the curve $x^2 + y^2 = 16a^2$ at the point $(2\sqrt{2a}, 2\sqrt{2a})$ is

A. a^2

B. $16a^2$

C. $4a^2$

D. $8a$

Answer: D



[View Text Solution](#)

68. Define $f(x) = \frac{1}{2}[|\sin x| + \sin x]$, $0 < x \leq 2\pi$. Then, f is

A. increasing in $\left(\frac{\pi}{2}, \frac{3\pi}{2}\right)$

B. decreasing in $\left(0, \frac{\pi}{2}\right)$ and decreasing in $\left(\frac{\pi}{2}, \pi\right)$

C. increasing in $\left(0, \frac{\pi}{2}\right)$ and decreasing in $\left(\frac{\pi}{2}, \pi\right)$

D. increasing in $\left(0, \frac{\pi}{4}\right)$ and decreasing in $\left(\frac{\pi}{4}, \pi\right)$.

Answer: C



[View Text Solution](#)

69. The smallest value of the constant $m > 0$ for which

$$f(x) = 9mx - 1 + \frac{1}{x} \geq 0 \text{ for all } x > 0, \text{ is}$$

A. $\frac{1}{9}$

B. $\frac{1}{16}$

C. $\frac{1}{36}$

D. $\frac{1}{81}$

Answer: C



View Text Solution

$$70. \int \frac{(x^2 + 1)}{x^2 + 7x^2 + 1} dx =$$

A. $\frac{1}{3} \tan^{-1} \left(\frac{x^2 - 1}{3x} \right) + c$

B. $\tan^{-1} \left(\frac{x^2 - 1}{x} \right) + c$

C. $\frac{1}{3} \tan^{-1} \left(\frac{x^2 - 1}{x} \right) + c$

D. $\frac{1}{\sqrt{3}} \tan^{-1} \left(\frac{x^2 - 1}{x} \right) + c$

Answer: A



View Text Solution

$$71. \int \frac{x^3}{\sqrt{1+x}} dx =$$

$$A. \sqrt{1+x^2} - \frac{x}{3}(1+x^2)^{3/2} + c$$

$$B. x\sqrt{1+x^2} + \frac{2}{3}(1+x^2)^{3/2} + c$$

$$C. x^2\sqrt{1+x^2} - \frac{2}{3}(1+x^2)^{3/2} + c$$

$$D. x^2\sqrt{1+x^2} - \frac{1}{3}(1+x^2)^{1/2} + c.$$

Answer: C



View Text Solution

$$72. \int \frac{dx}{\cos(x+4)\cos(x+2)} =$$

$$A. \frac{1}{\sin 2} \log |\cos(x+4)^2| + c$$

$$B. \frac{1}{2} \log \left| \frac{\sec(x+2)}{\sec(x+4)} \right| + c$$

$$\text{C. } \frac{1}{\sin 2} \log \left| \frac{\sec(x+4)}{\sec(x+2)} \right| + c$$

$$\text{D. } \log \left| \frac{\sec(x+4)}{\sec(x+2)} \right| + c$$

Answer: C



View Text Solution

$$73. \int \frac{2x+2}{\sqrt{x^2-4x-5}} dx =$$

$$\text{A. } \sqrt{x^2-4x-5} + \log \left| x + \sqrt{x^2-4x-5} \right| + c$$

$$\text{B. } \log \left| \sqrt{x^2-4x-5} \right| + \sqrt{x^2-4x-5} + c$$

$$\text{C. } \sqrt{x^2-4x-5} + 6 \log \left| (x-2) + \sqrt{x^2-4x-5} \right| + c$$

$$\text{D. } 2\sqrt{x^2-4x-5} + 6 \log \left| (x-2) + \sqrt{x^2-4x-5} \right| + c$$

Answer: D



View Text Solution

74. $\int_0^{\pi/4} \frac{\sin x + \cos x}{7 + 9 \sin 2x} dx =$

A. $\frac{\log 3}{4}$

B. $\frac{\log 3}{36}$

C. $\frac{\log 7}{12}$

D. $\frac{\log 7}{24}$

Answer: D



View Text Solution

75. $\int_0^{\pi/4} [\sqrt{\tan x} + \sqrt{\cot x}] dx =$

A. $\frac{\pi}{\sqrt{2}}$

B. $\frac{\pi}{2}$

C. $\frac{3\pi}{\sqrt{2}}$

D. π

Answer: A



[View Text Solution](#)

76. If the area bounded by the curves $y = ax^2$ and $x = ay^2$, ($a > 0$) is 3 sq. units then the value of a is

A. $\frac{2}{3}$

B. $\frac{1}{3}$

C. 1

D. 4

Answer: B



[View Text Solution](#)

77. Let $p \in IR$, then the differential equation of the family of curves $y = (\alpha + \beta x)3e^{px}$, where α, β are arbitrary constants, is

A. $y^n + 4py^1 + p^2y =$

B. $y^n - 2py^1 + p^2y = 0$

C. $y^n + 2py^1 - p^2y = 0$

D. $2^\epsilon + 2py^1 + p^2y = 0.$

Answer: B

[View Text Solution](#)

78. The solution of the differential equation $3xy' - 3y + (x^2 - y^2)^{1/2} = 0$, satisfying the condition $y(1) = 1$ is

A. $3 \cos^{-1}\left(\frac{y}{x}\right) = \ln|x|$

B. $3 \cos\left(\frac{y}{x}\right) = \ln|x|$

C. $3 \cos^{-1}\left(\frac{y}{x}\right) = 2 \ln|x|$

D. $3 \sin^{-1}\left(\frac{y}{x}\right) = \ln|x|$

Answer: A

[View Text Solution](#)

79. The solution of the differential equation $y^{-1} = \frac{1}{e^{-y} - x}$,
is

A. $x = e^{-y}(y + c)$

B. $y + e^{-y} = x + c$

C. $x = e^y(y + c)$

D. $x + y = e^{-y} + c$

Answer: A



[View Text Solution](#)

Physics

1. Electron microscope is based on the principle of

- A. Photoelectric effect
- B. Wave nature of electron
- C. Superconductivity
- D. Laws of electromagnetic induction

Answer: B



Watch Video Solution

2. Force is given by the expression $F = A \cos (Bx) + C \cos (Dt)$, where x is displacement and t is time. The dimension of $\frac{D}{R}$ is same as that of

- A. Velocity
- B. Velocity gradient

C. Angular momentum

D.

Answer: A



Watch Video Solution

3. A car accelerates from rest with $2m/s^2$ on a straight line path and then comes to rest after applying brakes. Total distance travelled by the car is 100 m in 20 seconds. Then, the maximum velocity attained by the car is

A. 10m/s

B. 20m/s

C. 15m/s

D. 5m/s

Answer: A



Watch Video Solution

4. A body is falling freely from a point A at a certain height from the ground and passes through points, B,C and D (vertically as shown below) so that $BC = CD$. The time taken by the particle to move from B to C is 2 seconds and from C to D 1 second. Time taken to move from A to B in seconds is



A. 0.6

B. 0.5

C. 0.2

D. 0.4

Answer: B



[View Text Solution](#)

5. A particle moves from (1,0,3) to the point (-3,4,5) when a force $F = \hat{i} + 5\hat{k}$ acts on it. Amount of work done in joules is

A. 14

B. 10

C. 6

D. 15

Answer: C



[Watch Video Solution](#)

6. A particle is projected with velocity $2\sqrt{gh}$ and at an angle 60° to the horizontal so that it just clears two walls of equal height h which are at a distance $2h$ from each other. The time taken by the particle to travel between these two walls is

A. $2\frac{\sqrt{(2h)}}{g}$

B. $\frac{\sqrt{(h)}}{2g}$

C. $2\frac{\sqrt{(h)}}{g}$

D. $\frac{\sqrt{(h)}}{g}$

Answer: C



Watch Video Solution

7. A body of mass 20kg is moving on a rough horizontal plane. A block of mass 3kg is connected to the 20kg mass by a string

of negligible mass through a smooth pulley as shown in the figure. The tension in the string is 27N. The coefficient of kinetic friction between the heavier mass and the surface is $(g = 10m/s^2)$



- A. 0.025
- B. 0.035
- C. 0.35
- D. 0.25

Answer: B



[View Text Solution](#)

8. Two masses m_1 and m_2 are placed on a smooth horizontal surface and are connected by a string of negligible mass. A horizontal force F is applied on the mass m_2 as shown in the figure. The tension in the string is



A. $\left(\frac{m_1}{m_1 + m_2}\right)F$

B. $\frac{m_2 F}{m_1 + m_2}$

C. $\left(\frac{m_1}{m_2}\right)F$

D. $\frac{m_2 F}{m_1}$

Answer: A



View Text Solution

9. A body of mass 3kg moving with a velocity $(2\hat{i} + 2\hat{j} + 3\hat{k})$ m/s collides with another body of mass 4kg moving with a velocity $(3\hat{i} + 2\hat{j} - 3\hat{k})$ m/s. The two bodies stick together after collision. The velocity of the composite body is

A. $\frac{1}{7}(4\hat{i} + 6\hat{j} - 3\hat{k})$

B. $\frac{1}{7}(18\hat{i} + 17\hat{j} - 3\hat{k})$

C. $\frac{1}{7}(6\hat{i} + 4\hat{j} - 6\hat{k})$

D. $\frac{1}{7}(9\hat{i} + 8\hat{j} - 6\hat{k})$

Answer: B



Watch Video Solution

10. A simple pendulum of length L carries a bob of mass m . when the bob is at its lowest position, it is given that the minimum horizontal speed necessary for it to move in a vertical circle about the point of suspension. When the string is horizontal, the net force on the bob is

A. $\sqrt{10}mg$

B. $\sqrt{5}mg$

C. $4mg$

D. $1mg$

Answer: A



Watch Video Solution

11. A system of two particles is having masses m_1 and m_2 . If the particle of mass m_1 is pushed towards the centre of mass of particles through a distance d , by what distance the particle of mass m_2 should be moved so as to keep the centre of mass of particles at the original position ?

A. $\frac{m_1}{m_1 + m_2}d$

B. d

C. $\frac{m_1}{m_2}d$

D. $\frac{m_2}{m_1}d$

Answer: C



Watch Video Solution

12. A thin uniform circular disc of mass M and radius R is rotating in a horizontal plane about an axis passing through its centre and perpendicular to its plane with an angular velocity ω . Another disc of same thickness and radius but of mass $\frac{1}{8} M$ is placed gently on the first disc coaxially. The angular velocity of the system is now

A. $\frac{9}{8}\omega$

B. $\frac{5}{9}\omega$

C. $\frac{1}{3}\omega$

D. $\frac{2}{9}\omega$

Answer: A



Watch Video Solution

13. 9 kg solution is poured into a glass U-tube as shown in the figure below. The tube's inner diameter is $2\frac{\sqrt{\pi}}{5}m$ and the solution oscillates freely up and down about its position of equilibrium ($x = 0$). The period of oscillation in seconds is (1 m^3 of solution has a mass $\mu = 900kg$. $g = 10m/s^2$, ignore frictional and surface tension effects).



A. 0.1

B. 10

C. $\sqrt{\pi}$

D. 1

Answer: A



View Text Solution

14. The bodies of masses 100 kg and 8100 kg are held at a distance of 1 m. The gravitational field at a point on the line joining them is zero. The gravitational potential at the point in J/kg is $\left(G = 6.67 \times 10^{-11} \text{ Nm}^2/\text{kg}^2\right)$

A. -6.67×10^{-7}

B. -6.67×10^{-10}

C. -13.34×10^{-7}

D. -6.67×10^{-9}

Answer: A



Watch Video Solution

15. Uranium has two isotopes of masses 235 and 238 units. If both of them are present in uranium hexafluoride gas, find the

percentage ratio of difference in rms velocities of two isotopes to the rms velocity of heavier isotope.

- A. 1.64
- B. 0.064
- C. 0.64
- D. 6.4

Answer: C



[Watch Video Solution](#)

16. A source of frequency 340 Hz is kept above a vertical cylindrical tube closed at lower end. The length of the tube is 120 cm. Water is slowly poured in just enough to produce

resonance. Then, the minimum height (velocity of sound = 340 m/s) of the water level in the tube for that resonance is

A. 0.75m

B. 0.25m

C. 0.95m

D. 0.45m

Answer: D



Watch Video Solution

17. A thin convex lens of focal length f made of crown glass is immersed in a liquid of refractive index μ_1 ($\mu_1 > \mu_c$) where μ_c is the refractive index of the crown glass.

The convex lens now is

- A. A convex lens of longer focal length
- B. A convex lens of shorter focal length
- C. A divergent lens
- D. A convex lens of focal length $(\mu_c - \mu_1)f$

Answer: C



Watch Video Solution

18. Two convex lenses of focal lengths f_1 and f_2 form images with magnification m_1 and m_2 when used individually for an object kept at the same distance from the lenses. Then f_1 / f_2 is

- A. $\frac{m_1(1 + m_1)}{m_2(1 + m_2)}$
- B. $\frac{m_1(1 + m_2)}{m_2(1 + m_1)}$

C. $\frac{m_2(1 + m_2)}{m_1(1 + m_2)}$

D. $\frac{m_2(1 + m_2)}{m_1(1 + m_1)}$

Answer:



Watch Video Solution

19. With the help of telescope that has an objective of diameter 200 cm. it is proved that ligh of wavelengths of the order of 6400 Å coming from a star can be easily resolved. Then, the limit of resolution is

A. $39 \times 10^{-4} deg$

B. $39 \times 10^{-8} rad$

C. $19.5 \times 10^{-8} rad$

D. $19.5 \times 10^{-8} deg$

Answer: B



Watch Video Solution

20. Two charged identical metal spheres A and B repel each other with a force of $3 \times 10^{-8} N$. Another identical uncharged sphere C is touched with sphere A and then it is placed midway between A and B. Then the magnitude of net force on C is

A. $1 \times 10^{-5} N$

B. $3 \times 10^{-5} N$

C. $2 \times 10^{-5} N$

D. $5 \times 10^{-5} N$

Answer: B



Watch Video Solution

21. The electrostatic potential inside a charged sphere is given as $V = Ar^2 + B$, where r is the distance from the centre of the sphere, A and B are constant. Then, the charge density in the sphere is

A. $16A \epsilon_0$

B. $-6A \epsilon_0$

C. $20A \epsilon_0$

D. $-15A \epsilon_0$

Answer: B



Watch Video Solution

22. Two electric resistors have equal values of resistance R . Each can be operated with a power of 320 watts [w] at 220 volts. If the two resistors are connected in series to a 110 volts electric supply, then the power generated in each resistor is

A. 90 watts

B. 80watts

C. 60watts

D. 20watts

Answer: D



Watch Video Solution

23. A current of 1 A is flowing along the side of an equilateral triangle of side 4.5×10^{-2} m. the magnetic field at the centroid of the triangle is ($\mu_0 = 4\pi \times 10^{-7} \text{ H/m}$)

A. $4 \times 10^{-5} T$

B. $2 \times 10^{-5} T$

C. $4 \times 10^{-4} T$

D. $2 \times 10^{-4} T$

Answer: B



Watch Video Solution

24. A charged particle (charges = q, mass = m) is rotating in a circle of radius R with uniform speed V ratio of its magnetic

moment (μ) to the angular momentum (L) is

A. $\frac{q}{2m}$

B. $\frac{q}{m}$

C. $\frac{q}{4m}$

D. $\frac{2q}{m}$

Answer: A



Watch Video Solution

25. Two small magnets have their masses and lengths in the ratio 1 : 2. the maximum torques experienced by them in a uniform magnetic field are the same. For small oscillations, the ratio of their time periods is

A. $\frac{1}{2\sqrt{2}}$

B. $\frac{1}{\sqrt{2}}$

C. $\left(\frac{1}{2}\right)$

D. $2\sqrt{2}$

Answer: A



Watch Video Solution

26. Two coils have mutual inductance 0.005 H . The current changes in the first coil according to equation $I = I_0 \sin \omega t$, where $I_0 = 10 \text{ A}$ and $\omega = 100\pi \text{ rad s}^{-1}$. The maximum value of induced emf in the second coil is

A. 5

B. 5π

C. 0.5π

D. π

Answer: B



Watch Video Solution

27. A capacitance of $\left(\frac{10^{-3}}{2\pi}\right)$ F and an inductance of $\left(\frac{100}{\pi}\right)$ mH and a resistance of 10Ω are connected in series with an AC voltage source of 220 V, 50 Hz. The phase angle of the circuit is 60°

A. 60°

B. 30°

C. 45°

D. 90°

Answer: C



Watch Video Solution

28. Two equations are given below:

$$(A) \int E \cdot dA = \frac{Q}{\epsilon_0}$$

$$(B) \int B \cdot dA = 0$$

They are

A. (A)-Ampere's law

(B)-Gauss law for electricity

B. (A)-Gauss law for electric fields

(B)-Gauss law for magnetic fields

C. (A)-Faraday law

(B) - Gauss law for electric fields

D. Both (A) and (B) Faraday law

Answer: B



Watch Video Solution

29. A charged particle is accelerated from rest through a certain potential difference. The de-Broglie wavelength is λ_1 when it is accelerated through V_1 and is λ_2 when accelerated through V_2 . Then ratio λ_1 / λ_2 is

A. $V_1^{3/2} : V_2^{3/2}$

B. $V_2^{1/2} : V_1^{1/2}$

C. $V_1^{1/2} : V_2^{1/2}$

D. $V_1^2 : V_2^2$

Answer: B



Watch Video Solution

30. If the first line of Lyman series has a wavelength 1215.4 \AA , the first line of Balmer series is approximately

A. 4864 \AA

B. 1025.5 \AA

C. 6563 \AA

D. 6400 \AA

Answer: C



Watch Video Solution

31. A certain radioactive element disintegrates with a decay constant of $7.9 \times 10^{-10} / s$. At a given instant of time, if the activity of the sample is equal to 55.3×10^{11} disintegration/second then number of nuclei at that instant of time is

A. 7.0×10^{21}

B. 4.27×10^{13}

C. 4.27×10^3

D. 6×10^{23}

Answer: A



Watch Video Solution

32. A semiconductor has equal electron and hole concentration of $2 \times 10^8 m^{-3}$. On doping with a certain impurity, the electron concentration increases to $4 \times 10^{10} m^{-3}$, then the new hole concentration of the semiconductor is

A. $10^6 m^{-3}$

B. $10^8 m^{-3}$

C. $10^{10} m^{-3}$

D. $10^{12} m^{-3}$

Answer: A



Watch Video Solution

33. A message signal of 12 kHz and peak voltage 20 V is used to modulate a carrier wave frequency 12 MHz and peak voltage 30 V. then, the modulation index is

A. 0.32

B. 6.7

C. 0.67

D. 67

Answer: C



Watch Video Solution

1. Assertion (A) Atoms with completely filled and half-filled subshells are stable.

Reason (R) Completely filled and half filled subshells have symmetrical distribution of electrons and have maximum exchange energy.

The correct answers is

A. (A) and (R) are correct , (R) is the correct explanation of

(A)

B. (A) and (R) are correct , (R) is not correct explanation of

(A).

C. (A) is correct , but (R) is correct

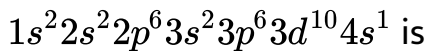
D. (A) is not correct, but (R) is correct

Answer: A



Watch Video Solution

2. The element with the electronic configuration



A. Cu

B. Ca

C. Cr

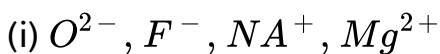
D. Co

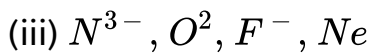
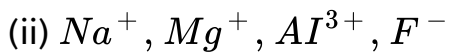
Answer: A



Watch Video Solution

3. Among the following the isoelectronic specie (S) is/are





A. (i) & (ii)

B. (i), (ii) & (iii)

C. (ii) & (iii)

D. (i) & (iii)

Answer: D



Watch Video Solution

4. What is the atomic number of the element with symbol Uus?

A. 117

B. 116

C. 115

D. 114

Answer: A

 [Watch Video Solution](#)

5. 

 [View Text Solution](#)

6. The order of covalent character of KF, KI

A. $KCl < KF < KI$

B. $KI < KCl < KF$

C. $KF < KI < KCl$

D. $KF < KCl < KI$

Answer: D



Watch Video Solution

7. If the kinetic energy in j, of CH_4 (molar mass = 16g mol^{-1}) at T (K) is X, the kinetic energy in j, of O_2 (molar mass = 32 g mol^{-1}) at the same temperature is

A. X

B. 2X

C. X^2

D. $\frac{X}{2}$

Answer: A

8. The given figure shows the Maxwell distribution of molecular speeds of a gas at three different temperatures T_1 , T_2 and T_3 . The correct order of temperature is :



A. $T_1 > T_2 > T_3$

B. $T_1 > T_3 > T_2$

C. $T_3 > T_2 > T_1$

D. $T_2 > T_3 > T_1$.

Answer: D

9. In Haber's process 50.0g of N_2 [g] and 10.0 g of H_2 [g] are mixed to produce NH_3 [g]. What is the number of moles of NH_3 [g] formed?

A. 3.33

B. 2.36

C. 2.01

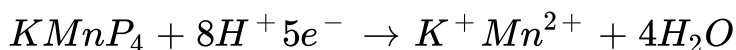
D. 5.36

Answer: A



Watch Video Solution

10. The following reaction occurs in acidic medium



what is the equivalent weight of $KMnO_4$?

[Molecular weight of $KMnO_4 = 158$]

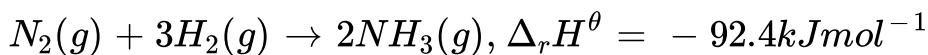
- A. 79.0
- B. 31.6
- C. 158.0
- D. 39.0

Answer: B

 [Watch Video Solution](#)

11.

Given



What is the standard enthalpy of formation of NH_3 gas ?

- A. -92

B. + 46

C. + 92

D. - 46

Answer: D



Watch Video Solution

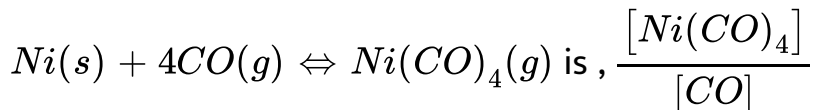
12. Which one of the following is correct?

A. The equilibrium constant (K_c) is independent of temperature.

B. The value of K_c is independent of initial concentrations of reactants and products.

C. At equilibrium, the rate of the forward reaction is twice the rate of the backward reaction.

D. The equilibrium constant (K_c) for the reaction



Answer: A



Watch Video Solution

13. pH of an aqueous solution of NH_4Cl is

A. 7

B. > 7

C. < 7

D. 1

Answer: C



Watch Video Solution

14. What is the change in the oxidation state of Mn in the reaction of MnO_4^- with H_2O_2 in acidic medium?

A. $7 \rightarrow 4$

B. $6 \rightarrow 4$

C. $7 \rightarrow 2$

D. $6 \rightarrow 2$

Answer: C



Watch Video Solution

15. Which one of the following will not give flame test?

A. Ca

B. Ba

C. Sr

D. Be

Answer: D



Watch Video Solution

16. Which one of the following forms a basic oxide?

A. B

B. Tl

C. Al

D. Ga

Answer: B



Watch Video Solution

17. The gas produced by the passage of air over hot coke is

A. Carbon monoxide

B. Carbon dioxide

C. Producer gas

D. Water gas

Answer: C



Watch Video Solution

18. In environmental chemistry, the medium which is affected by a pollutant is called as the

A. Sink

B. Slag

C. Solvent

D. Receptor

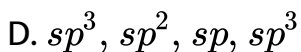
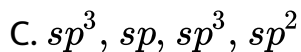
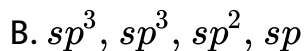
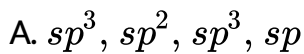
Answer: D



Watch Video Solution

19. The hybridisation of each carbon in the following compound is





Answer: A



View Text Solution

20. The product Z of the following reaction is





Answer: B



Watch Video Solution

21. The packing efficiency of simple cubic (sc.) body centred cubic (bcc) and cubic close packing (ccp) lattices follow the order

A. $b < p < sc$

B. $p < b < sc$

C. $sc < p < b$

D. $sc < b < p$

Answer: D

 [Watch Video Solution](#)

22. The experimental depression in freezing point of a dilute solution is 0.025 K. if the van't hoff factor (i) is 2.0 the calculated depression in freezing point (in K) is

A. 0.00125

B. 0.025

C. 0.0125

D. 0.05

Answer: C

 [Watch Video Solution](#)

23. The molality of an aqueous dilute solution containing non-volatile solute is 0.1 m. What is the boiling temperature (in $^{\circ}C$) of solution? (Boiling point elevation constant, $k_b = 0.52 \text{ kg mol}^{-1} K$ boiling temperature of water = $100. ^{\circ}C$)

A. 100.0052

B. 100.052

C. 100.0

D. 100.52

Answer: B



Watch Video Solution

24. Which one of the following is an emulsion?

A. Milk

B. Soap lather

C. Butter

D. Vanishing Cream

Answer: A



Watch Video Solution

25. Copper matte contains

A. Cu_2O , Cu_2S

B. Cu_2O , FeO

C. Cu_2S, FeS

D. Cu_2S, FeO

Answer: C



Watch Video Solution

26. X reacts with dilute nitric acid to form laughing gas . What is X?

A. Cu

B. P_4

C. S_8

D. Zn

Answer: D



Watch Video Solution

27. Xenon reacts with fluorine at 873 K and 7 bar to form XeF_4 .

In this reaction, the ratio of xenon and fluorine required is

A. 1 : 5

B. 10 : 1

C. 1 : 3

D. 5 : 1

Answer: A



Watch Video Solution

28. Which of the following metal ions has a calculated magnetic moment value of $\sqrt{24}$ BM ?



Answer: B



[Watch Video Solution](#)

29. Which one of the following does not exhibit geometrical isomerism ?



B. Square planar complex with formula $[MX_2L_2]$

C. Tetrahedral complex with formula $[MABXL]$

D. Octahedral complex with formula $[MX_2(L - L)_2]$

Answer: C



Watch Video Solution

30. The poly dispersity index (PDI) of a polymer is (\overline{M}_w = weight average molecular mass and \overline{M}_n number average molecular mass)

A. The product of \overline{M}_n and \overline{M}_w

B. The sum of \overline{M}_n and \overline{M}_w .

C. The difference between \overline{M}_w and \overline{M}_n

D. The ratio between \overline{M}_w and \overline{M}_w .

Answer: D



Watch Video Solution

31. Hormone that maintains the blood glucose level within the limit is

A. Thyroxine

B. Insulin

C. Testosterone

D. Epinephrine

Answer: B



Watch Video Solution

32. Chloroxylenol is an example of

- A. Antiseptic
- B. Antipyretic
- C. Analgesic
- D. Tranquilizer

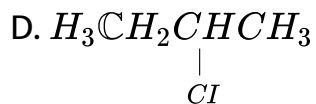
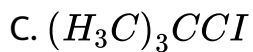
Answer: A



[Watch Video Solution](#)

33. Which one of the following has highest boiling point?

- A. $H_3CCH_2CH_2CH_2Cl$
- B. $(H_3C)_2CHCH_2Cl$



Answer: A



Watch Video Solution



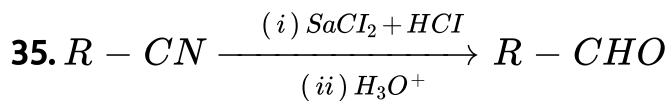
Identify X and Y from the following



Answer: B



Watch Video Solution



What is the name of the above reaction ?

- A. Rosenmund
- B. Williamson
- C. Stephen
- D. Kobe

Answer: C



Watch Video Solution

36. 

What are the structures of Y and Z ?

A. 

B. 

C. 

D. 

Answer: D



[View Text Solution](#)