



MATHS

BOOKS - NCERT MATHS (ENGLISH)

POLYNOMIALS

Multiple Choice Questions

1. 11. If -3 is one of the zeroes of the polynomial

$(k - 1)x^2 + kx + 1$, find the value of k ,

A. $\frac{4}{3}$

B. $\frac{-4}{3}$

C. $\frac{2}{3}$

D. $\frac{-2}{3}$

Answer: A



Watch Video Solution

2. A quadratic polynomial, whose zeroes are -3 and 4, is

A. $x^2 - x + 12$

B. $x^2 + x + 12$

C. $\frac{x^2}{2} - \frac{x}{2} - 6$

D. $2x^2 + 2x - 24$

Answer: C



Watch Video Solution

3. If the zeroes of the quadratic polynomial $x^2 + (a + 1)x + b$ are 2 and -3, then find the values of a and b

A. $a = -7, b = -1$

B. $a = 5, b = -1$

C. $a = 2, b = -6$

D. $a = 0, b = -6$

Answer: D



Watch Video Solution

**4. The number of polynomials having zeroes as
-2 and 5 is**

A. 1

B. 2

C. 3

D. more than 3

Answer: D



Watch Video Solution

5. If one of the zeroes of the cubic polynomial $ax^3 + bx^2 + cx + d$ is zero, then the product of other two zeroes is

A. $\frac{-c}{a}$

B. $\frac{c}{a}$

C. 0

D. $\frac{-b}{a}$

Answer: B



Watch Video Solution

6. If one of the zeroes of the cubic polynomial

$x^3 + ax^2 + bx + c$ is -1 , then find the

product of other two zeroes.

A. $b - a + 1$

B. $b - a - 1$

C. $a - b + 1$

D. $a - b - 1$

Answer: A



Watch Video Solution

7. The zeroes of the quadratic polynomial

$x^2 + 99x + 127$ are

A. both positive

B. both negative

C. one positive and one negative

D. both equal

Answer: B



Watch Video Solution

8. The zeroes of the quadratic polynomial

$x^2 + kx + k$ where $k \neq 0$, are : (1)cannot both

be positive (2)cannot both be negative (3)are
always unequal (4)are always equal

A. cannot both be positive

B. cannot both be negative

C. are always unequal

D. are always equal

Answer: A



Watch Video Solution

9. If the zeroes of the quadratic polynomial $ax^2 + bx + c$, where $c \neq 0$, are equal, then



[Watch Video Solution](#)

10. If one of the zeroes of a quadratic polynomial of the form $x^2 + ax + b$ is the negative of the other, then it

A. has no linear term and the constant term is negative

B. has no linear term and the constant term is positive

C. can have a linear term but the constant term is negative

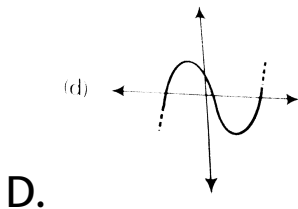
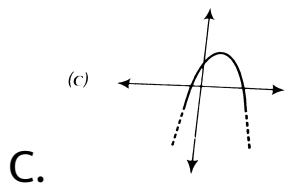
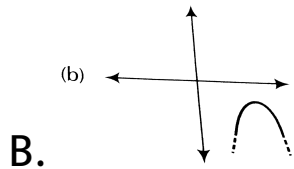
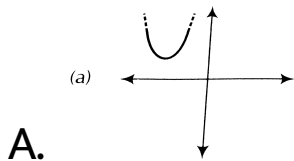
D. can have a linear term but the constant term is positive

Answer: A



Watch Video Solution

11. Which of the following is not the graph of a quadratic polynomial?



Answer: D



Watch Video Solution

Very Short Answer Type Questions

1. Answer the following and justify.

(i) can $x^2 - 1$ be the quotient on division of $x^6 + 2x^3 + x - 1$ by a polynomial in x of degree 5?

(ii) What will the quotient and remainder be on division of $ax^2 + bx + c$ by $px^3 + qx^2 + rx + s, p \neq 0$?

(iii) If on division of a polynomial $p(x)$ by a

polynomial $g(x)$, the quotient is zero, what is the relation between the degree of $p(x)$ and $g(x)$?

(iv) If on division of a non-zero polynomial $p(x)$ by a polynomial $g(x)$, the remainder is zero, what is the relation between the degrees of $p(x)$ and $g(x)$?

(v) Can the quadratic polynomial $x^2 + kx + k$ have equal zeroes for some odd integer $k > 1$?



Watch Video Solution

2. Are the following statements 'True' or 'False'? Justify your answer.

(i) If the zeroes of a quadratic polynomial $ax^2 + bx + c$ are both positive, then a, b and c all have the same sign.

(ii) If the graph of a polynomial intersects the X-axis at only one point, it cannot be a quadratic polynomial.

(iii) If the graph of a polynomial intersects the X-axis at exactly two points, it need not be a quadratic polynomial.

(iv) If two of the zeroes of a cubic polynomial are zero, then it does not have linear and

constant terms.

(v) If all the zeroes of a cubic polynomial are negative, then all the coefficients and the constant term of the polynomial have the same sign.

(vi) If all three zeroes of a cubic polynomial $x^3 + ax^2 - bx + c$ are positive, then at least one of a, b and c is non-negative.

(vii) The only value of k for which the quadratic polynomial $kx^2 + x + k$ has equal zeroes is $\frac{1}{2}$.



[View Text Solution](#)

Short Answer Type Questions

1. Find the zeroes of the following polynomials by factorisation method and verify the relations between the zeroes and the coefficients of the polynomials

(i) $4x^2 - 3x - 1$



[Watch Video Solution](#)

2. Find the zeroes of the following polynomials by factorisation method and verify the

relations between the zeroes and the coefficients of the polynomials

(ii) $3x^2 + 4x - 4$



[Watch Video Solution](#)

3. Find the zeroes of the following polynomials by factorisation method and verify the relations between the zeroes and the coefficients of the polynomials

(iii) $5t^2 + 12t + 7$.



[Watch Video Solution](#)

4. Find the zeroes of the following polynomials by factorisation method and verify the relations between the zeroes and the coefficients of the polynomials (iv)

$$t^3 - 2t^2 - 15t.$$



[Watch Video Solution](#)

5. Find the zeroes of the following polynomials by factorisation method and verify the relations between the zeroes and the

coefficients of the polynomials

$$(v) 2x^2 + \frac{7}{2}x + \frac{3}{4}$$



[Watch Video Solution](#)

6. Find the zeroes of the following polynomials by factorisation method and verify the relations between the zeroes and the coefficients of the polynomials (vi)

$$4x^2 + 5\sqrt{2}x - 3.$$



[Watch Video Solution](#)

7. Find the zeroes of the following polynomials by factorisation method and verify the relations between the zeroes and the coefficients of the polynomials

$$(vii) 2s^2 - (1 + 2\sqrt{2})s + \sqrt{2}$$



[Watch Video Solution](#)

8. Find the zeroes of the following polynomials by factorisation method and verify the relations between the zeroes and the

coefficients of the polynomials

$$(viii) v^2 + 4\sqrt{3}v - 15$$



[Watch Video Solution](#)

9. Find the zeroes of the following polynomials by factorisation method and verify the relations between the zeroes and the coefficients of the polynomials

$$(ix) y^2 + \frac{3}{2}\sqrt{5}y - 5$$



[Watch Video Solution](#)

10. Find the zeroes of the following polynomials by factorisation method and verify the relations between the zeroes and the coefficients of the polynomials

$$(x) 7y^2 - \frac{11}{3}y - \frac{2}{3}$$



[Watch Video Solution](#)

Long Answer Type Questions

1. For each of the following find a quadratic polynomial whose sum and product

respectively of the zeroes are as given. Also, find the zeroes of these polynomials by factorisation. (i) $\frac{-8}{3}, \frac{4}{3}$ (ii) $\frac{-3}{2\sqrt{5}}, -\frac{1}{2}$



[Watch Video Solution](#)

2. Given that zeroes of cubic polynomial $x^3 - 6x^2 + 3x + 10$ are of the form $a, a+b, a+2b$ for some real numbers a and b , find the values of a and b as well as zeroes of the given polynomial.



[Watch Video Solution](#)

3. If $\sqrt{2}$ is a zero of $p(x) = 6x^3 + \sqrt{2}x^2 - 10x - 4\sqrt{2}$, find the remaining zeros



[Watch Video Solution](#)

4. The value of k , if $x^2 + 2x + k$ is a factor of $2x^4 + x^3 - 14x^2 + 5x + 6$ is



[Watch Video Solution](#)

5. If $x - \sqrt{5}$ is a factor of the cubic polynomial $x^3 - 3\sqrt{5}x^2 + 13x - 3\sqrt{5}$, then find all the zeroes of the polynomial.



Watch Video Solution

6. For which values of a and b , the zeroes of $q(x) = x^3 + 2x^2 + a$ are also the zeroes of the _____ polynomial

$$p(x) = x^5 - x^4 - 4x^3 + 3x^2 + 3x + b?$$

Which zeroes of $p(x)$ are not the zeroes of $q(x)$?



Watch Video Solution