



# BIOLOGY

## BOOKS - NCERT BIOLOGY (ENGLISH)

### RESPIRATION IN PLANTS

#### Multiple Choice Questions

1. The ultimate electron acceptor of respiration in an aerobic organism is

A. cytochrome

B. oxygen

C. hydrogen

D. glucose

**Answer:**



**Watch Video Solution**

**2. Phosphorylation of glucose during glycolysis is catalysed by**

A. phosphoglucomutase

B. phosphoglucoisomerase

C. hexokinase

D. phosphorylase

**Answer: C**



**Watch Video Solution**

**3.** Pyruvic acid, the key product of glycolysis can have many metabolic fates. Under aerobic condition it forms

A. lactic acid

B.  $CO_2 + H_2O$

C. acetyl  $Co - A + CO_2$

D. ethanol +  $CO_2$

**Answer: B**



**Watch Video Solution**

**4. Electron Transport system (ETS) is located in mitochondrial**

A. outer membrane

B. inter membrane space

C. inner membrane

D. matrix

**Answer: C**



**Watch Video Solution**

5. Which of the following exhibits the highest rate of respiration?

A. Growing shoot apex

B. Germinating seed

C. Root tip

D. Leaf bud

**Answer: B**



**Watch Video Solution**

**6.** Mitochondria are called power houes of the cell. Which of the following observations support this statement?

A. Mitochondria synthesise ATP

B. Mitochondria have a double membrane

C. The enzymes of the Krebs' cycle and the cytochromes are found in mitochondria.

D. Mitochondria are found in almost all plants and animal cells.

**Answer: A**



**Watch Video Solution**

7. The end product of oxidative phosphorylation is

A. NADH

B. oxygen

C. ADP

D.  $ATP + H_2O$

**Answer: D**



**Watch Video Solution**



## 8. Match the following columns.

Column I	Column II
A. Molecular oxygen	1. $\alpha$ - ketoglutaric acid (1)
B. Electron acceptor	2. Hydrogen acceptor (A)
C. Pyruvate dehydrogenase	3. Cytochrome- c (B)
D. Decarboxylation	4. Acetyl Co - A (C)

A. *A B C D*  
2 3 4 1

B. *A B C D*  
3 4 2 1

C. *A B C D*  
2 1 3 4

D. *A B C D*  
4 3 1 2

**Answer:**



**Watch Video Solution**

## Very Short Answer Type Questions

1. Energy is released during the oxidation of compounds in respiration. How is this energy stored and released as and when it is needed?



[Watch Video Solution](#)

2. Explain the term 'energy currency'. Which substance acts as energy currency in plants and animals?



[Watch Video Solution](#)

3. Different substrates get oxidised during respiration. How does Respiratory Quotient (RQ) indicate which type of substrate, i.e., carbohydrate, fat or protein is getting oxidised?

$$R. Q. = \frac{A}{B}$$

What do A and B stand for?

What type of substrates have R.Q. of 1, < 1 or > 1?



**Watch Video Solution**

4.  $F_0 - F_1$  particles in the synthesis of .....



[View Text Solution](#)

5. When does anaerobic respiration occur in man and yeast?



[Watch Video Solution](#)

6. Which of the following will release more energy on oxidation? Arrange them in

ascending order.

A. 1 gm of fat

B. 1 gm of protein

C. 1 gm of glucose

D. 0.5 gm of protein +0.5 gm glucose

**Answer:**



**Watch Video Solution**

7. The product of aerobic glucolysis in skeletal muscle and anaerobic fermentation in yeast are respectively..... And ..... .



[Watch Video Solution](#)

## Short Answer Type Questions

1. If a person is feeling dizzy, glucose or fruit juice is given immediately but not a cheese

sandwich, which might have more energy.

Explain.



[Watch Video Solution](#)

2. What is meant by the statement 'aerobic' respiration is more efficient?



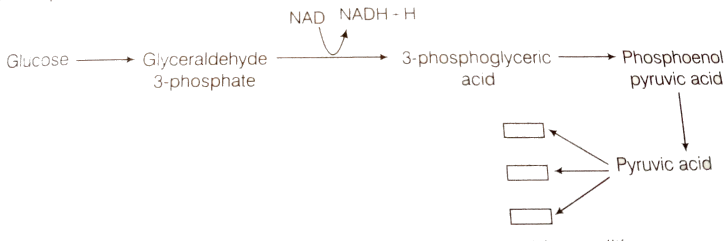
[Watch Video Solution](#)

3. Pyruvic acid is the end product of glycolysis.

What are the three metabolic fates of pyruvic

acid under aerobic and anaerobic conditions?

Write in the space provided in the diagram.



 **Watch Video Solution**

4. The energy yield in terms of ATP is higher in aerobic respiration than during anaerobic respiration. Why is there anaerobic respiration even in organism that live in aerobic condition like human beings and angiosperms ?





[Watch Video Solution](#)

5. Oxygen is an essential requirement for aerobic respiration but it enters the respiratory process at the end? Discuss.



[View Text Solution](#)

6. Respiration is an energy releasing and enzymatically controlled catabolic process which involves a step-wise oxidative

breakdown of organic process which involves a step-wise oxidative breakdown of organic substances inside living . In this statement about respiration explain the meaning of

(a) Step-wise breakdown

(b) Organic substances (used as substrates).



[View Text Solution](#)

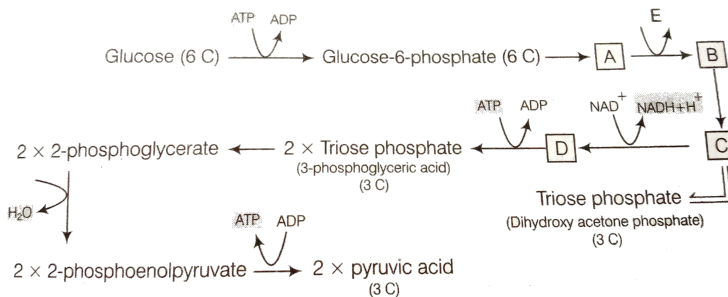
7. Comment of the statement respiration is an energy producing process but ATP is being used in some steps of the process.



Watch Video Solution

8. The figure given below shows the steps in glycolysis. Fill in the missing steps A,B,C,D and also indicate wheater ATP is being used up or released at step E?

11. STEP 11



View Text Solution

9. Respiratory pathway is



[Watch Video Solution](#)

10. We commonly call ATP as the energy currency of the cell. Can you think of some other energy carriers present in a cell ? Name any two.



[Watch Video Solution](#)

**11.** ATP produced during glycolysis is a result of substrate level phosphorylation. Explain.



**Watch Video Solution**

**12.** Do you know any step in the TCA cycle where there is substrate level phosphorylation. Which one?



**Watch Video Solution**

**13.** In a way green plants and cyanobacteria have synthesised all the food on the earth.

Comment .



**Watch Video Solution**

**14.** When a substrate is being metabolised, why does not all the energy that is produced get released in one step. It is released in multiple steps. What is the advantage of step-wise release?





[Watch Video Solution](#)

**15.** Respiration requires  $O_2$ . How did the first cells on the earth manage to survive in an atmosphere that lacked  $O_2$ ?



[Watch Video Solution](#)

**16.** It is known that red muscle fibres in animals can work for longer periods of time continuously. How is this possible ?



[Watch Video Solution](#)

**17.** The energy yield of ATP is higher in aerobic respiration than during anaerobic respiration.

Explain.



**Watch Video Solution**

**18.** RuBP carboxylase, PEPcase, pyruvate dehydrogenase, ATPase, cytochrome oxidase, hexokinase, lactate dehydrogenase. Select/choose enzymes from the list above which are



involved in

(a) Photosynthesis (b) Respiration.

Both in photosynthesis and respiration



[Watch Video Solution](#)

**19.** How does a tree trunk exchange gases with the environment although it lacks stomata?



[Watch Video Solution](#)

20. Write two energy yielding reactions of glycolysis.



**Watch Video Solution**

21. Name the site (s) of pyruvate synthesis. Also write the chemical reaction wherein pyruvic acid dehydrogenase acts as a catalyst.



**Watch Video Solution**

**22.** Respiratory pathway is believed to be a catabolic pathway. However, nature of TCA cycle is amphibolic. Explain.



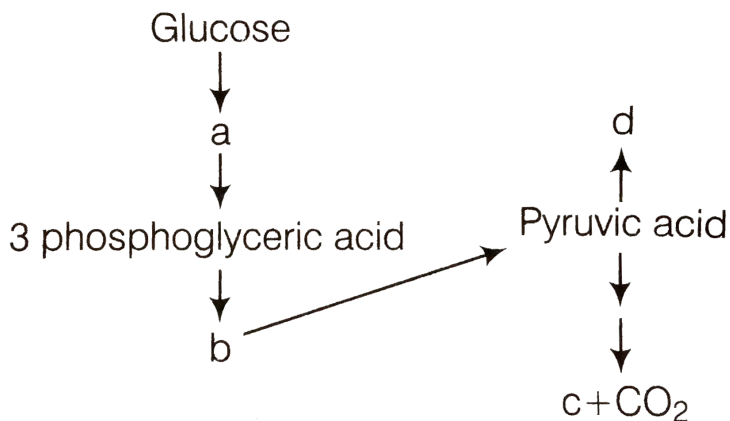
**View Text Solution**

**23.** Mention the important series of events of aerobic respiration that occur in the matrix of the mitochondrion as well as one that take place in inner membrane of the mitochondrion.



## Long Answer Type Questions

1. In the following flow chart, replace the symbols a,b,c and d with appropriate terms, Briefly explain the process and give any two application of it.





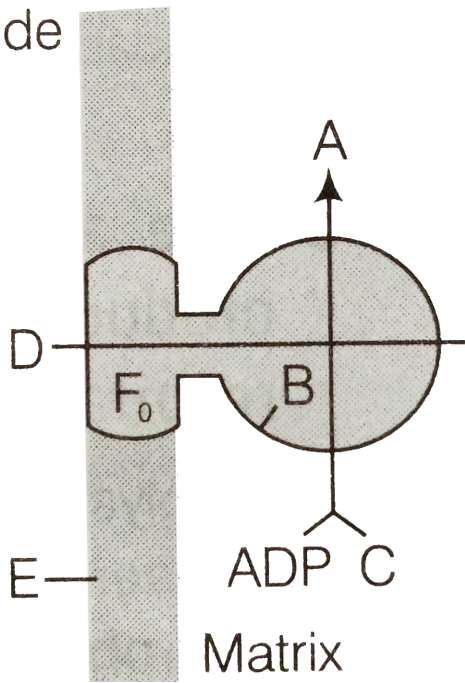
Watch Video Solution

2. Given below is a diagram showing ATP synthesis during aerobic respiration, replace the symbols A, B,C, D and E by appropriate terms as given below.

$F_1$  particle, formation of  $\pi$ ,  $2H^+$ , inner mitochondrial membrane, ATP,  $F_o$  particle,

ADP .

Outer side



[View Text Solution](#)

3. oxygen is critical for aerobic respiration.

Explain its role with respect to ETS.



[Watch Video Solution](#)

4. Enumerate the assumptions that we undertaker in making the respiratory balance Sheet . Are these assumptions valid for a living system? Compare fermentation and aerobic respiration in this context.



[View Text Solution](#)

5. Given an account of glycolysis. Where does it occur? What are the end products? Trace the fate of these products in both aerobic and anaerobic respiration.



**Watch Video Solution**