



# MATHS

## BOOKS - NCERT MATHS (ENGLISH)

### LINEAR INEQUALITIES

#### Short Answer Type Questions

1.  $\frac{4}{x-1} \leq 3 \leq \frac{6}{x+1} (x > 0)$



Watch Video Solution

$$2. \frac{|x - 2| - 1}{|x - 2| - 2} \leq 0$$



Watch Video Solution

$$3. \frac{1}{|x| - 3} \leq \frac{1}{2}$$



Watch Video Solution

$$4. |x - 1| \leq 5, |x| \geq 2$$



Watch Video Solution

5.  $-5 \leq \frac{2 - 3x}{4} \leq 9$



[Watch Video Solution](#)

6.  $4x + 3 \geq 2x + 17, 3x - 5 < -2$



[Watch Video Solution](#)

7. A company manufactures cassettes. Its cost and revenue functions are  $C(x)=26000+30x$  and  $R(x)= 43x$ , respectively, where  $x$  is the number of cassettes produced and sold in a week. How

many cassettes must be sold by the company to realise some profit ?



[Watch Video Solution](#)

8. The water acidity in a pool is considered normal when the average pH reading of three daily measurements is between 8.2 and 8.5. If the first two pH readings are 8.48 and 8.35, then find the range of pH value for the third reading that will result in the acidity level being normal.



[Watch Video Solution](#)

[Watch Video Solution](#)

9. Solution of 9% acid is to be diluted by adding 3% acid solution to it. The resulting mixture is to be more than 5% but less than 7% acid, If there is 460L of the 9% solution, how many litres of 3% solution will have to be added



[Watch Video Solution](#)

10. A solution is kept between  $40^{\circ}C$  and  $45^{\circ}C$ . What is the range of temperature in degree fahrenheit, if the conversion formula is  $F = \frac{9}{5}C + 32$ ?



[Watch Video Solution](#)

11. The longest side of a triangle is twice the shortest side and the third side is 2 cm longer than the shortest side. If the perimeter of the triangle is more than 166 cm, then find the minimum length of the shortest side.



Watch Video Solution

12. In drilling world's deepest hole it was found that the temperature  $T$  in degree Celsius,  $x$  Km below the earth's surface was given by  $T = 30 + 25(x - 3)$ ,  $3 \leq x \leq 15$ . At what depth will the temperature be between  $155^\circ C$  and  $205^\circ C$ ?



Watch Video Solution

Long Answer Type Question

1. Solve each of the following system of

equation in  $R$ :  $\frac{2x + 1}{7x - 1} > 5, \frac{x + 7}{x - 8} > 2$

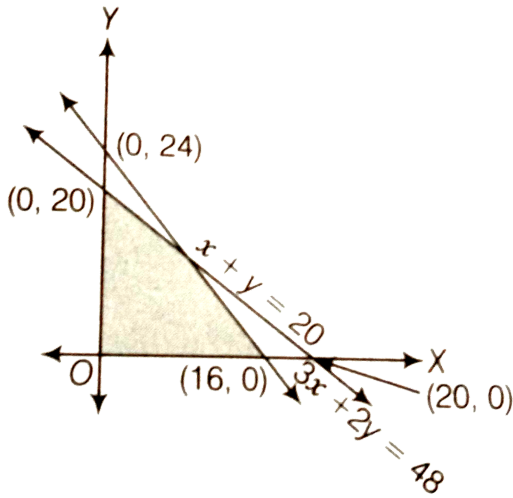


**Watch Video Solution**

2. Find the linear inequalities for which the shaded region in the given figure is the solution



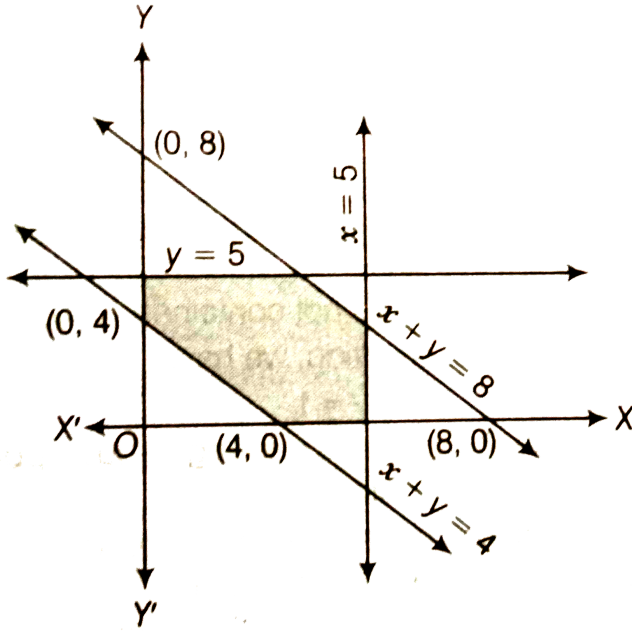
set.



[Watch Video Solution](#)

3. Find the linear inequalities for which the shaded region in the given figure is the solution

set.



[Watch Video Solution](#)

4. Show that the following system of linear inequalities has no solution

$$x + 2y \leq 3, 3x + 4y \geq 12, x \geq 0, y \geq 1.$$



[Watch Video Solution](#)

5. Solve the following system of linear inequalities

$$3x + 2y \geq 24, 3x + y \leq 15, x \geq 4.$$



[Watch Video Solution](#)

6. Show that the solution set of the following system of linear inequalities is an unbounded region  $2x + y \geq 8, x + 2y \geq 10, x \geq 0, y \geq 0$ .



[Watch Video Solution](#)

## Objective Type Questions

1. If  $x < 5$ , then

A.  $-x < -5$

B.  $-x < 5$

C.  $-x > -5$

D.  $-x \geq -5$

**Answer: C**



2. If  $x, y$  and  $b$  are real number and  $x < y, b < 0$

, then

A.  $\frac{x}{b} < \frac{y}{b}$

B.  $\frac{x}{b} \leq \frac{y}{b}$

C.  $\frac{x}{b} > \frac{y}{b}$

D.  $\frac{x}{b} \geq \frac{y}{b}$

**Answer: C**



3. If  $-3x + 17 < -13$ , then

A.  $x \in (10, \infty)$

B.  $x \in [10, \infty)$

C.  $x \in (-\infty, 10]$

D.  $x \in [-10, 10)$

**Answer: A**



**Watch Video Solution**

4. If  $x$  is a real number and  $|x| < 3$ , then

A.  $x \geq 3$

B.  $-3 < x < 3$

C.  $x \leq -3$

D.  $-3 \leq x \leq 3$

**Answer: B**



**Watch Video Solution**

5. Let  $x$  and  $b$  are real numbers. If  $b > 0$  and  $|x| > b$ , then

A.  $x \in (-b, \infty)$

B.  $x \in [-\infty, b)$

C.  $x \in (-b, b)$

D.  $x \in (-\infty, -b) \cup (b, \infty)$

**Answer: D**



**Watch Video Solution**



6. If  $|x - 1| > 5$ , then

A.  $x \in (-4, 6)$

B.  $x \in [-4, 6]$

C.  $x \in (-\infty, -4) \cup (6, \infty)$

D.  $x \in [-\infty, -4) \cup [6, \infty)$

**Answer: C**



**Watch Video Solution**

7. If  $|x + 2| \leq 9$ , then

A.  $x \in (-7, 11)$

B.  $x \in [-11, 7]$

C.  $x \in (-\infty, -7) \cup (11, \infty)$

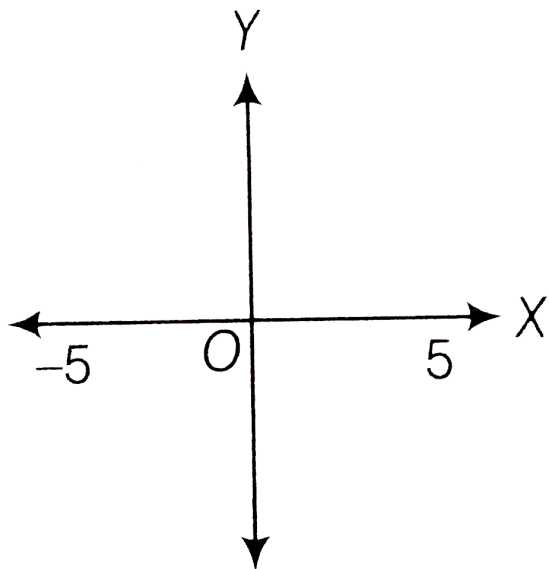
D.  $x \in (-\infty, -7) \cup [11, \infty)$

**Answer: B**



**Watch Video Solution**

8. The inequality representing the following graph is



A.  $|x| < 5$

B.  $|x| \leq 5$

C.  $|x| > 5$


D.  $|x| \geq 5$

**Answer: A**



Watch Video Solution

9. The given graph represents



A.  $x \in (-\infty, 5)$

B.  $x \in (-\infty, 5]$

C.  $x \in [5, \infty)$

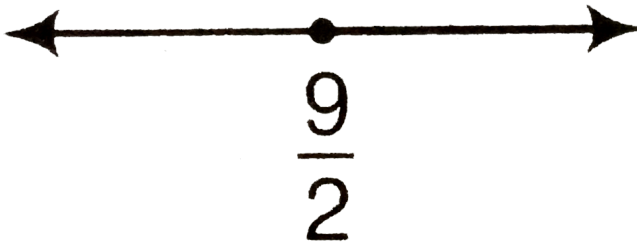
D.  $x \in (5, \infty)$

Answer: D



Watch Video Solution

10. The inequality representing the following graph is



A.  $x \in \left( \frac{9}{2}, \infty \right)$

B.  $x \in \left[ \frac{9}{2}, \infty \right)$

C.  $x \in - \left[ \infty, \frac{9}{2} \right)$

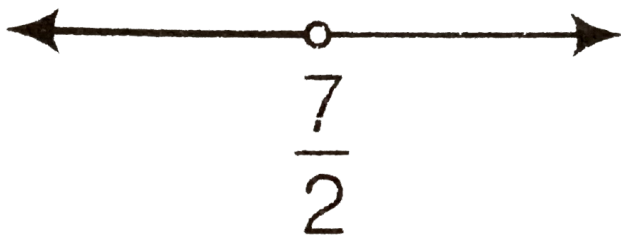
D.  $x \in \left( - \infty, \frac{9}{2} \right]$

**Answer: B**



**Watch Video Solution**

**11.** The inequality representing the following graph is



A.  $x \in \left( -\infty, \frac{7}{2} \right)$

B.  $x \in \left( -\infty, \frac{7}{2} \right]$

C.  $x \in \left[ \frac{7}{2}, -\infty \right)$

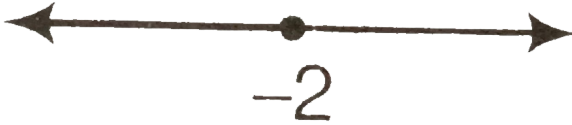
D.  $x \in \left( \frac{7}{2}, \infty \right)$

**Answer: A**



**Watch Video Solution**

12. The given graph represents which of the following



A.  $x \in ( - \infty, - 2 )$

B.  $x \in ( - \infty, - 2 ]$

C.  $x \in ( - 2, \infty ]$

D.  $x \in [ - 2, \infty )$

**Answer: B**



**Watch Video Solution**



**13.** State which of the following statements is true or false.

(i) If  $x < y$  and  $b < 0$ , then  $\frac{x}{b} < \frac{y}{b}$ .

(ii) If  $xy > 0$ , then  $x > 0$  and  $y < 0$

(iii) If  $xy > 0$ , then  $x < 0$  and  $y < 0$

(iv) If  $xy < 0$ , then  $x < 0$  and  $y < 0$

(v) If

$x < -5$  and  $x < -2$ , then  $x \in (-\infty, -5)$

(vi) If

$x < -5$  and  $x > 2$ , then  $x \in (-5, 2)$

(vii) If

$x > -2$  and  $x < 9$ , then  $x \in (-2, 9)$

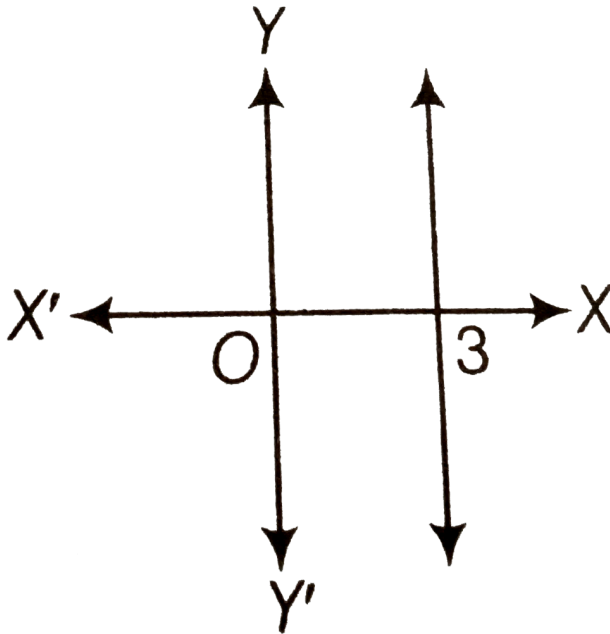
(viii)

If

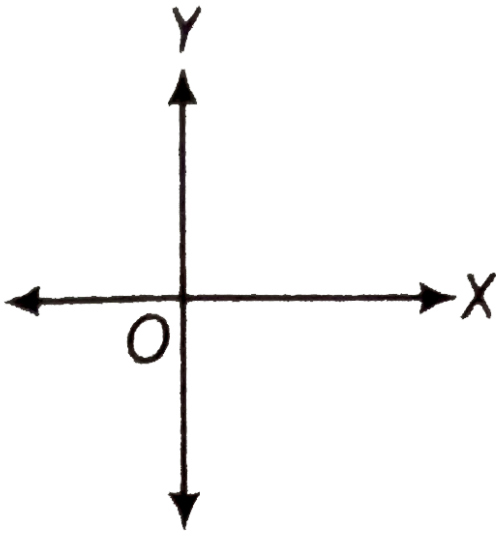
$|x| > 5$ , then  $x \in (-\infty, -5) \cup [5, \infty)$

(ix) If  $|x| \leq 4$ , then  $x \in [-4, 4]$

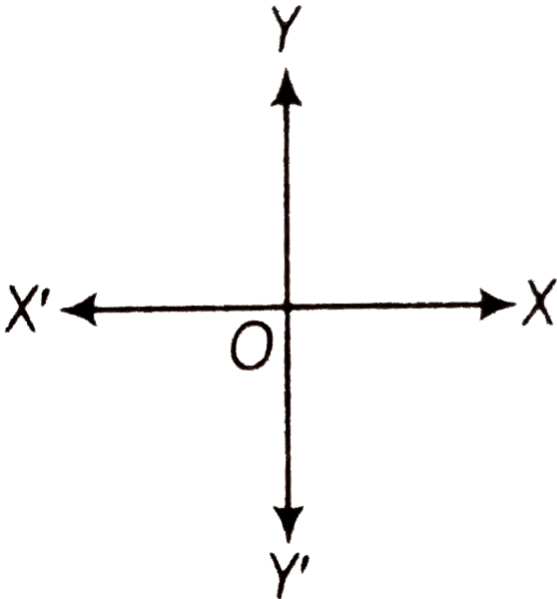
(x) Graph of  $x < 3$  is



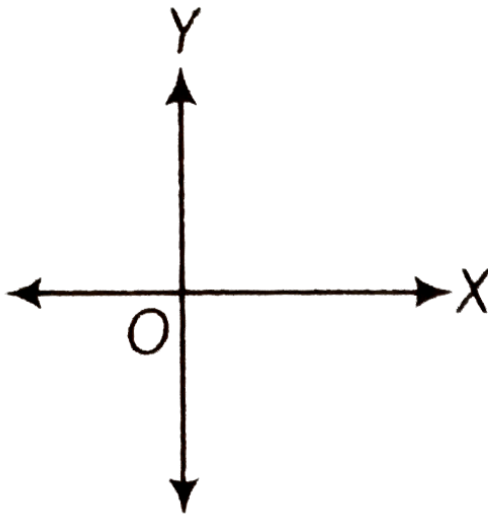
(xi) Graph of  $x \geq 0$  is



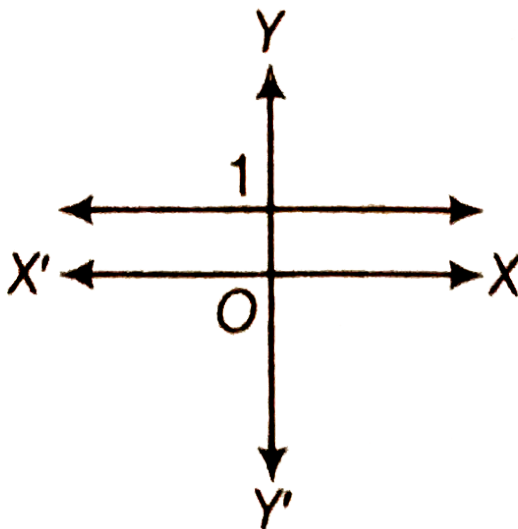
(xii) Graph of  $y \leq 0$  is



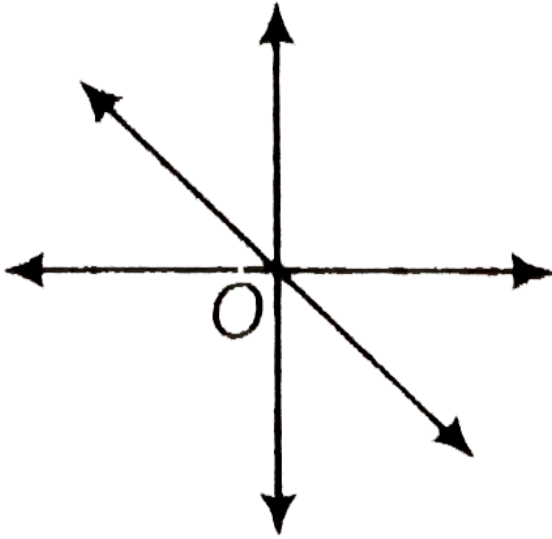
(xiii) Solution set of  $x \leq 0$  and  $y \leq 0$  is



(xiv) Solution set of  $x \geq 0$  and  $y \leq 1$  is



(xv) Solution set of  $x + y \geq 0$  is



[View Text Solution](#)

14. Fill in the blanks of the following (i) If

$-4x \geq 12$ , then  $x \dots -3$ . (ii) If

$\frac{-3}{4}x \leq -3$ , then  $x \dots 4$ . (iii) If

$\frac{2}{x+2} > 0$ , then  $x \dots - 2$ . (iv) If

$x > -5$ , then  $4x \dots - 20$ .



**Watch Video Solution**