



BIOLOGY

BOOKS - NTA MOCK TESTS

NTA NEET SET 30

Biology

1. The sweet potato family is included in the order

A. Polymoniales

B. Sapindales

C. Poales

D. Asparagales

Answer: A



Watch Video Solution

2. The following are some statements about leucocytes. Which of these is incorrect?

1. The most abundant leucocyte is a

granulocyte, whereas the least abundant leucocyte is an agranulocyte.

II. The largest leucocyte is a granulocyte, whereas the smallest leucocyte is an agranulocyte.

III. Phagocytic leucocytes may be agranulocyte or granulocyte.

IV. Polymorphonuclear leucocytes are the largest granulocyte, whereas the largest agranulocyte has a kidney-shaped nucleus.

A. I, II and III

B. II and IV

C. III and IV

D. I and II

Answer: D



Watch Video Solution

3. A doctor has ordered a test for serum bilirubin. The patient goes to a pathologist who collects his blood. The pathologist should collect this blood in a test tube containing

A. Anti-coagulant sodium citrate

B. Anti-coagulant double oxalate

C. Anti - coagulant fluorides

D. No anti-coagulant

Answer: D



Watch Video Solution

4. The renin-angiotensin mechanism to increase blood pressure involves organs in the following order.

A. Kidney- Liver - Lungs - Adrenal gland -

Kidney

B. Kidney- Lungs - Liver - Adrenal gland -

Kidney

C. Kidney- Liver - Adrenal gland - Lungs -

Kidney

D. Kidney- Lungs - Adrenal gland - Liver -

Kidney

Answer: A



Watch Video Solution

5. internal fertilization is seen in

A. Algae

B. Amphibians

C. Fungi

D. Bony fishes

Answer: C



Watch Video Solution

6. What floral reward does *Amorphophallus* particularly provide to its pollinator?

A. Floral oils

B. Pollen grains

C. Nectar

D. Safe place to lay eggs

Answer: D



Watch Video Solution

7. My nucellar cells surrounding the embryo sac and develop into the embryos. Each of my ovule contains many embryos. Who am I?

A. Apple

B. Litchi

C. Lemon

D. Strawberry

Answer: C



Watch Video Solution

8. Which lupine was excavated from the tundra that germinated and flowered after a record 10,000 years?

A. *Lupinus polyphyllus*

B. *Lupinus Lepidus*

C. *Lupinus littoralis*

D. *Lupinus arcticus*

Answer: D



Watch Video Solution

9. Choose the correct group of plants that use entomophily as their preferred method of pollination

A. *Zostera*, *Vallisneria*

B. *Zea mays*, *Sorghum vulgare*

C. *Bougainvillea*, *Salvia*

D. *Butea*, *Bauhinia*

Answer: C



Watch Video Solution

10. In the development of Angiosperms,
generally

A. The development of endosperm starts
before the development of embryo.

B. The development of endosperm starts
after the development of an embryo

C. The development of endosperm starts
along with the development of embryo

D. The endosperm disappears before the development of embryo starts.

Answer: A



Watch Video Solution

11. The height of a plant is controlled by three genes. The maximum height in the species is 24 inches , whereas the minimum height in the species is 6 inches . What would be the height

of a plant of the same species whose genotype
in $AaBBcc$?

A. 12 inches

B. 15 inches

C. 18 inches

D. 21 inches

Answer: B



Watch Video Solution

12. With respect to blood groups, the person having _____ blood group is definitely heterozygous.

A. A

B. B

C. AB

D. O

Answer: C



Watch Video Solution

13. Which of the following genotypes represents a pea plant with yellow pods and wrinkled seeds?

A. ggrr

B. Yyrr

C. yyrr

D. GGrr

Answer: A



Watch Video Solution

14. which of the following example of intragenic inheritance was discovered by Mendel?

A. Co-dominance

B. Incomplete dominance

C. complete dominance

D. None

Answer: D



Watch Video Solution

15. Which of the following statement/s about test cross is/are correct?

I. Every test cross but not every back cross is a test cross.

II. Every back cross is a test cross but not every test cross is a back cross.

III. The ratio of a test cross is always 1:1.

IV. A test cross can be considered as a type of reciprocal cross.

A. I and III

B. I, III and IV

C. II and IV

D. I

Answer: D



Watch Video Solution

16. In Andalusian fowls, the mating of black and white fowls will produce

A. Black fowis

B. White fowis

C. Blue fowis

D. Grey fowis

Answer: C



Watch Video Solution

17. Which of the following does not belong to the Palaeozoic era?

A. Silurian

B. Cretaceous

C. Devonian

D. Carboniferous

Answer: B



Watch Video Solution

18. Choose the pairs of organs that are a result of convergent evolution

i. Wings of butterflies and wings of birds.

ii. Flippers of penguins and flippers of dolphins

iii. Eyes of octopus and eyes of mammals.

iv. Thorns of Bougainvillea and tendrils of Cucurbita.

v. Sweet potato and potato.

vi. Vertebrate hearts and vertebrate brains

A. i, ii, v and vi

B. i, ii, iii and iv

C. i, ii and vi

D. i, ii, iii and v

Answer: D



19. The first cellular forms of life appeared on earth about

- A. 500 mya
- B. 2000 mya
- C. 2500 mya
- D. 350 mya

Answer: B



20. An out-cross will have parents

A. From different breeds

B. From same breeds but with common
ancestors only from one side

C. From same breed but with common
ancestors from both sides

D. From same breed but with no common
ancestors

Answer: D



Watch Video Solution

21. Competitive release' refers to

A. Inability of two species to co-exist indefinitely and eventual elimination of the competitively inferior species

B. Avoidance of competition between species competing for same resource by

figuring a compromise

C. Expansion of distribution of a species

restricted to a small area due to a

competitively superior species being

experimentally eliminated

D. Evolutionary success in devising a

mechanism to counter and neutralize

competition

Answer: C



Watch Video Solution

22. The intrinsic rate of natural increase for Indian human population according to the 2011 census was

A. 0.0205

B. 0.0147

C. 0.0652

D. 0.0351

Answer: B



Watch Video Solution

23. The highest factor contributing to the dry weight of organisms is

A. Water

B. Carbon

C. Hydrogen

D. Nitrogen

Answer: B



Watch Video Solution

24. Arrange the following in descending order of their percentage of the total cost of various ecosystem services

A. Soil formation > nutrient cycling >

climate regulation

B. Soil formation > climate regulation >

nutrient cycling

C. climate regulation > nutrient cycling >

Soil formation

D. climate regulation gt Soil formation gt
nutrient cycling

Answer: A



Watch Video Solution

25. Choose the incorrect statement from the following

A. Sun is the only source of energy for every single ecosystem on earth

B. Plants capture 2 - 10% of PAR

C. Ecosystems follow the 2nd law of thermodynamics

D. In a terrestrial ecosystem major producers are herbaceous and woody plants

Answer: A



Watch Video Solution

26. Which of the following comparisons is correct?

A. Number of recorded animals $<$
number of recorded plants

B. Number of national parks in India $<$
Number of biodiversity hotspots in the
world

C. Number of varieties of mango in India
 $>$ number of varieties of rice in India

D. The percentage of mammals facing the threat of extinction $<$ the percentage of amphibians facing the threat of extinction

Answer: D



Watch Video Solution

27. Bali , Javan and Caspian are the sub-species of which of the following

A. Lion

B. Tiger

C. Panther

D. Cheetah

Answer: B



Watch Video Solution

28. Which part of the biosphere reserve is an area of active cooperation between reserve management and the local people, wherein

activities like settlements, cropping, forestry and recreation and other economic uses continue in harmony with conservation goals ?

A. Core area

B. Buffer area

C. Transition area

D. Any where in the biosphere reserve

Answer: C



Watch Video Solution

29. Arrange the following efforts to control pollution in chronological order.

A. In India, the air (Prevention and control of Pollution) Act was amended to include noise as an air pollutant.

B. The government of India passed the water (Prevention and Control of Pollution) Act to safeguard our water resources.

C. Recognizing the deleterious effects of ozone depletion, the Montreal Protocol became effective.

D. The National Forest Policy of India

recommended 33% forest cover for the plains
and 67 % for this hills.

A. A - B - D - C

B. B - A - D - C

C. B - A - C - D

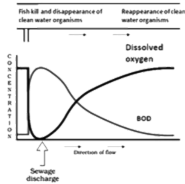
D. A - B - C - D

Answer: B

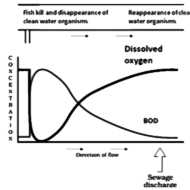


Watch Video Solution

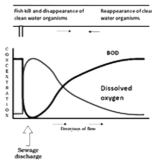
30. Choose the correct representation of effect of sewage discharge on important characteristics of a river.



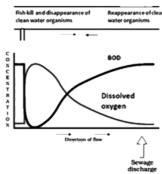
A.



B.



C.



D.

Answer: A



Watch Video Solution

31. Identify the tissue which has been incorrectly matched with its function.

A. Columnar Epithelium - Secretion

B. Columnar Epithelium - Absorption

C. Squamous Epithelium - Both secretion and absorption

D. Ciliated Epithelium - Move particles or mucous in a certain direction

Answer: C



Watch Video Solution

32. Select the correct statement from the following .

I. Bones support and protect softer tissue and organs

II. Blood is a fluid connective tissue.

III. Cartilage is a type of specialised muscle tissue.

IV. The bone marrow found in some bones is the site of production of leucocytes.

A. I and II

B. I, II, III

C. I, II, III and IV

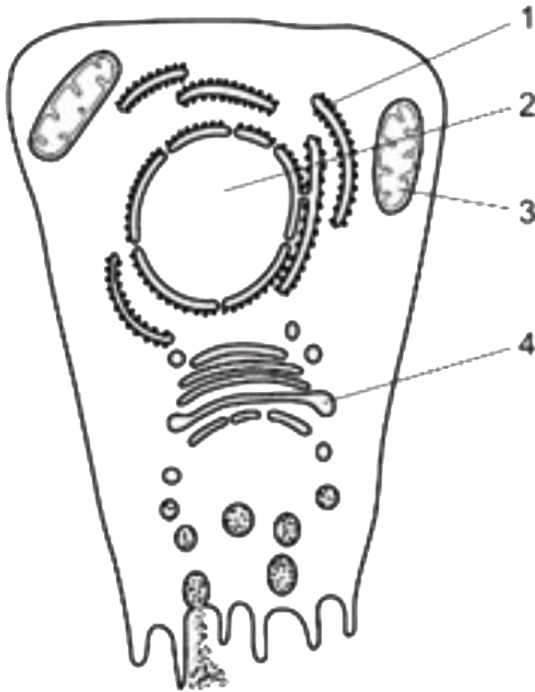
D. I, II and IV

Answer: D



Watch Video Solution

33. Radioactively - labelled d- nucleotides are introduced into a cell.



In which cell structures will the radioactively first become concentrated ?

A. 1 and 2

B. 1 and 4

C. 2 and 3

D. 3 and 4

Answer: C



Watch Video Solution

34. Which type of cell contains the highest proportion of cell structures bound by a single membrane?

A. Ciliated epithelial cell

B. Red blood cell

C. Smooth muscle cell

D. Goblet cell

Answer: D



Watch Video Solution

35. Some features of cells are listed. Which features can be found both in plant cells and prokaryotic cells?

I. Cell wall

II. Cell surface membrane

III. Ribosome

A. I and III only

B. II and III only

C. I and III only

D. I, II and III

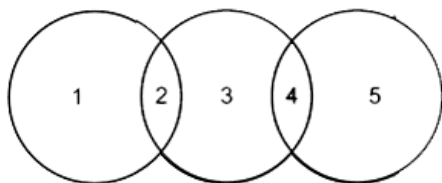
Answer: D



Watch Video Solution

36. The diagram shows the relationship between some biological molecules.

Which row is correct for this relationship?



	1	2	3	4	5
A	Glucose	Carbohydrate	Sucrose	Monomer	Fructose
B	Cellulose	Polymer	Starch	Carbohydrate	Amylase
C	Fructose	Reducing sugar	Glucose	Monomer	Amino acid
D	Haemoglobin	Protein	Amylose	Polymer	Cellulose

A. A

B. B

C. C

D. D

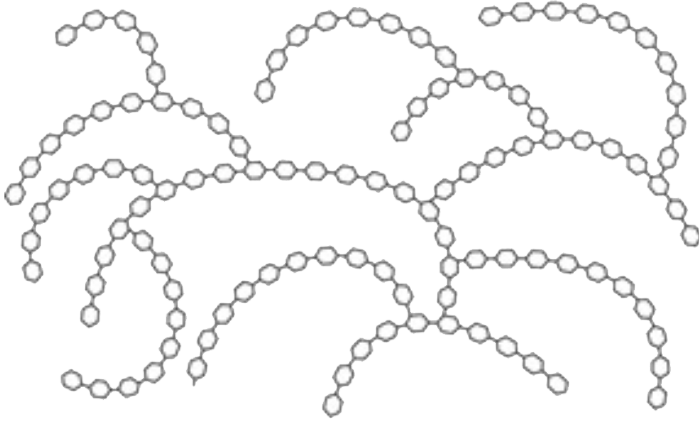
Answer: C



Watch Video Solution

37. The diagram shows part of a carbohydrate molecule formed by glucose monomer. What is

the name of the molecule?



A. Amylose

B. Cellulose

C. Starch

D. Glycogen

Answer: D



Watch Video Solution

38. What is the effect of an enzyme in an enzyme-catalysed reaction?

A. Decrease the activation energy and decreases the energy yield

B. decrease the activation energy and has no effect on the energy yield

C. increase the activation energy and increases the energy yield

D. increases the energy yield and decreases
the activation energy

Answer: B



Watch Video Solution

39. How many copies of each different DNA molecule will be found in a cell at the beginning of each of these stages of the

mitotic cell cycle ?

	G 2 of Interphase	Prophase	Cytokinesis
A	1	1	2
B	1	2	1
C	2	1	2
D	2	2	2

A. A

B. B

C. C

D. D

Answer: D



Watch Video Solution

40. For successful cell replacement during tissue repair, the chromosome content of each daughter cell must be identical to that of the mother cell. Which stages of mitosis make sure that each daughter cell receives one chromatid from each chromatid pair?

A. Prophase and metaphase

B. Metaphase and anaphase

C. Anaphase and telophase

D. Telophase and interphase

Answer: B



Watch Video Solution

41. The process of exchange ofA.....from the atmosphere with CO_2 produced by the cells is calledB....., commonly known asC..... . Choose the alternative that will correctly replace A, B and C in the above statement and make it meaningful.

A. $A - N_2$, B - ventilation, C - respiration

B. $A - NO_2$, B - breathing , C - combustion

C. $A - O_2$, B - breathing , C - respiration

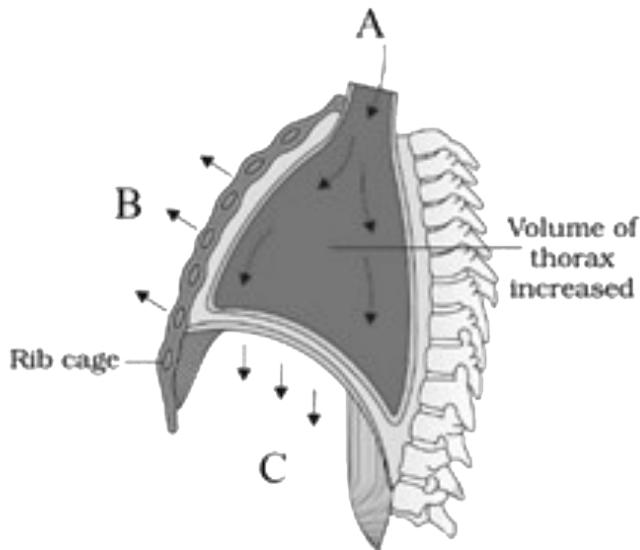
D. A - water vapour , B - ventilation, C -
combustion

Answer: C



Watch Video Solution

42. Observe the given diagram . Identify the label A, B and C.



A. A - Air goes inside to lungs, B - Ribs and sternum returned to original position, C- Diaphragm relaxed are arched upward

B. A - Air goes inside to lungs, B - Ribs and sternum raised, C- Diaphragm contracted

C. A - Air expelled from lungs, B - Ribs and sternum returned to original position, C- Diaphragm contracted

D. A - Air expelled from lungs, B - Ribs and sternum raised, C- Diaphragm relaxed are arched upward

Answer: B



Watch Video Solution

43. Identify the correct DNA triplet on the original DNA template that will code for the amino acid histidine based on the following table.

Amino acid	Anti-codon
Ala	CGU
His	GUA
Ser	UCA

A. CAU

B. CGT

C. GTA

D. GUA

Answer: C



Watch Video Solution

44. From the following, Identify the statements that are correct regarding tRNA.

I. Hydrogen bonds between bases temporarily hold tRNA against mRNA.

II. The base sequences in the tRNA molecules are the same as the base sequences in the mRNA that is being translated.

III. The specificity of the tRNA molecule for glycine and the specificity of the enzyme that loads glycine are both necessary for correct loading.

A. I, II and III

B. I and II only

C. I and III only

D. II and III only

Answer: C



Watch Video Solution

45. DNA polymerase catalyses condensation reactions between molecules during semi-conservative replication of DNA. Which two molecules are joined by DNA polymerase?

- A. Base and base
- B. Base and nucleotide
- C. Nucleotide and nucleotide

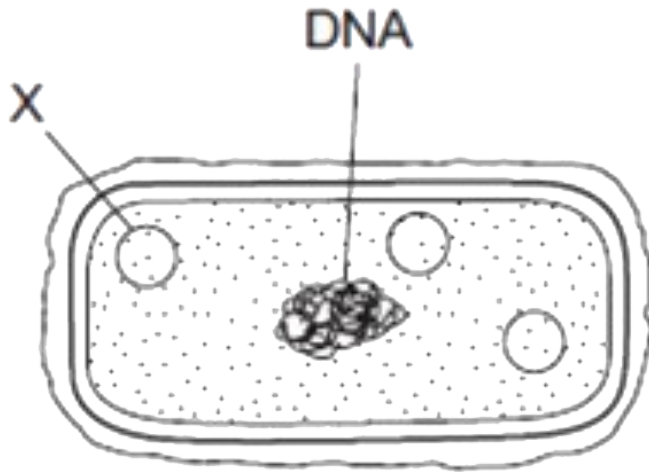
D. Phosphate and deoxyribose

Answer: C



Watch Video Solution

46. The diagram shows the structure of a bacterial cell.



The presence of structure C in the bacterial cell is one reason why bacteria are used in genetic engineering . In the cloning vector pBR322, which gene is responsible for the replication of structure X ?

A. Cla I

B. BamH I

C. ori

D. rop

Answer: D



Watch Video Solution

47. Which of the following statement/s is/are and example of genetic engineering?

I. Inserting a gene for human insulin production into bacteria.

II. Selective breeding to produce cattle with

high milk yields.

III. Using methods like crop rotation with leguminous plants to increase the fertility of the soil.

IV. Vegetative propagation and grafting are practised to ensure higher yield.

A. I, II and IV

B. II and III

C. I and III

D. Only I

Answer: D



Watch Video Solution

48. Ligase enzymes are used in genetic engineering to :

- A. Cut open plasmid DNA
- B. Insert plasmides into bacteria
- C. Isolate the DNA making up a human gene
- D. Join human DNA to plasmid DNA

Answer: D



Watch Video Solution

49. To produce insulin via a non-human cell, which of the following would be required to be inserted in the vector's plasmid?

A. a segment of DNA from a human

B. a segment of DNA from another bacterium

C. a molecule of insulin

D. an enzyme

Answer: A



Watch Video Solution

50. In some area, farmers who grow genetically modified (GM) corn have to make sure there is a gap between GM and non - GM crops. What is the reason for leaving a gap between the crops?

A. so they can get large machinery into the field

B. to prevent cross-pollination between GM and non-GM crops

C. to prevent diseases spreading between crops

D. to prevent pests attacking crops

Answer: B



Watch Video Solution

51. Which of the following organisms is an odd one out with respect to mode of nutrition?

- A. Gonyaulax
- B. Chlamydomonas
- C. Trypanosmona
- D. Nostoc

Answer: C



Watch Video Solution

52. Dikaryophase is commonly seen in members of:

- A. Ascomycetes and Phycomycetes.
- B. Ascomycetes and Basidiomycetes.
- C. Phycomycetes and Basidiomycetes
- D. Basidiomycetes and Deuteromycetes.

Answer: B



Watch Video Solution

53. Which of these statement/s about lichens is/are true?

I. Lichens are mutually beneficial symbiotic associations.

II. They grow extensively in area with high pollution, hence called as pollution indicators.

III. The phycobiont member, algae, is an autotroph and the mycobiont member, fungi, is a heterotroph.

IV. Fungi help the algae harvest sunlight for photosynthesis.

A. II and III

B. I and III

C. I, II and III

D. III and IV

Answer: B



Watch Video Solution

54. Fill in the blanks A, B, C and D with the correct choice of words.

Viruses are (A), protected by a protein coat

called (B). The protein coat is made up of the assembly of small units called the (C). It protects the internal (D)of the viruses.

A. A-glycolipids, B - capsule, C- chains, D - sugars

B. A- lipoproteins, B- covers, C- helices, D- genetic material

C. A-glycoproteins, B - cell wall, C - fatty acids, D - cytoplasm

D. A- nucleoproteins, B - capsid, C- capsomeres, D- genetic material.

Answer: D



Watch Video Solution

55. Observe the below diagram. Identify the option suggesting the correct function of A, B

and C.



A. A - Helps in attachment to the substratum, B- Stalk for supporting the body of brown algae, C - Leaf-like Photosynthetic organ for producing food

B. A - Stalk for supporting the body of brown algae, B- Leaf-like Photosynthetic organ for producing food, C - Helps in attachment to the substratum

C. A - Leaf-like Photosynthetic organ for producing food, B- Stalk for supporting the body of brown algae, C - Helps in attachment to the substratum

D. A - Leaf-like Photosynthetic organ for producing food, B - Helps in attachment to the substratum , C - Stalk for supporting the body of brown algae

Answer: C



Watch Video Solution

56. Roots of which of the following plants are involved in nitrogen fixation?

A. Cycas

B. Pinus

C. Banyan

D. Peepal

Answer: A



Watch Video Solution

57. Identify the correct match between the types of aestivation and their examples.

Types of Aestivation	Examples
i. Valvate	a. Cotton
ii. Twisted	b. Bean
iii. Imbricate	c. <i>Calotropis</i>
iv. Vexillary	d. Gulmohar

A. i-a, ii-d, iii-b, iv-c

B. i-d, ii-c, iii-b, iv-a

C. i-a, ii-b, iii-c, iv-d

D. i-c, ii-a, iii-d, iv-b

Answer: D



Watch Video Solution

58. A plant with racemose inflorescence, zygomorphic flowers, five sepals and petals showing vexillary aestivation, monocarpellary and unilocular superior ovary, androecium consisting of ten stamens.

The above-listed conditions are characteristics of the which family of plants?

A. Solanaceae

B. Fabaceae

C. Lilaceae

D. Brassicaceae

Answer: B



Watch Video Solution

59. In some plants, the leaves are shortlived and small. The petioles of such plants expand and become green. One such plant is:

A. Cactus

B. Venus fly-trap

C. Australian acacia

D. Peas

Answer: C



Watch Video Solution

60. The edible part of coconut fruit is :

A. Perisperm

B. endosperm

C. endocarp

D. mesocarp

Answer: B



Watch Video Solution

61. Read the following statements about monocot root. Which amongst them are correct?

I. It shows a polyarch condition of xylem.

II. Central pith is less or absent.

III. The monocot root does not undergo secondary growth.

A. Only I

B. I, II and III

C. I and III

D. I and II

Answer: C



Watch Video Solution

62. Arrange the below four layers in proper order starting from the outermost to the innermost layer after secondary growth has already occurred in a dicot stem.

I. Phellem

II. Wood

III. Phelloderm

IV Vascular cambium

A. $I \rightarrow II \rightarrow III \rightarrow IV$

B. $I \rightarrow III \rightarrow II \rightarrow IV$

C. $IV \rightarrow III \rightarrow II \rightarrow I$

D. $III \rightarrow II \rightarrow I \rightarrow IV$

Answer: B



Watch Video Solution

63. Which of the following is correct with respect to uphill transport using channel pumps?

A. Lower concentration to higher concentration utilizing ATP

B. Higher concentration to lower

concentration utilizing ATP

C. Higher concentration to lower

concentration without utilizing ATP

D. Hypertonic solution to hypotonic

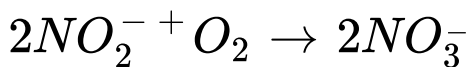
solution

Answer: A



Watch Video Solution

64. The process of nitrogen cycling by microbes involves multiple steps of oxidation and simultaneous reduction. The following reaction occurring during one such step is brought about by which bacteria?



- A. Pseudomonas
- B. Nitrosomonas
- C. Nitrobacter
- D. Thiobacillus

Answer: C



Watch Video Solution

65. According to Blackman's law of limiting factor, which of the following is the most important limiting factor in the process of photosynthesis?

A. Water

B. CO_2

C. Light

D. temperature

Answer: B



Watch Video Solution

66. How many cycles of cyclic and non-cyclic photophorylation would be required in order to generate enough energy for the production of one glucose molecule?

A. 10 cyclic and 4 non-cyclic

photophosphorylation

B. 6 cyclic and 6 non-cyclic

photophosphorylation

C. 2 cyclic and 4 non-cyclic

photophosphorylation

D. 8 cyclic and 1 non-cyclic

photophosphorylation

Answer: B



Watch Video Solution

67. How many of the following are the substrates involved in the Krebs's cycle?

Citric acid, succinic acid, hydrochloric acid, a-ketoglutaric acid, fumaric acid, malic acid, pyruvic acid, phosphoglyceric acid, acetic acid

A. six

B. four

C. five

D. three

Answer: C



Watch Video Solution

68. In which of the following form, glycerol can enter the cell as a cellular substrate?

A. PGA

B. Pyruvate

C. PGAL

D. PEP

Answer: C



Watch Video Solution

69. Read the given statements about auxins and state whether they are true or false :

a. Auxin promotes apical dominance.

b. Auxins have a negative impact on cytokinin levels.

c. F.W went isolated auxins from the coleoptiles of the coleptiles of the oat plant.

d. Auxin promotes flowering in the pineapple plants.

A. a - false, b - false, c-true, d - false

B. a - true, b - false, c - true, d - true

C. a - true, b-false, c - true, d - false

D. a - false, b - true, c - true, d- true

Answer: B



Watch Video Solution

70. Growth of vascular cambium is an example of :

- A. Senescence
- B. Geometric growth
- C. Arithmetic growth
- D. Plasticity

Answer: C



Watch Video Solution

71. Which of the following statements is incorrect regarding organisms of phylum Chordata?

A. The organisms are characterized by the presence of a notochord and a ventral hollow nerve cord

B. They are triploblastic and bilaterally symmetrical

C. They have a ventral heart

D. They are further divided into three subphyla.

Answer: A



Watch Video Solution

72. How many of the following organisms belong to the second-largest phylum?

Apple snail, Pearl, oyster, Anopheles, Culex, Aedes, Starfish, Sea urchin, Cuttlefish, Sea cucumber, Squid, Devil fish

A. 9

B. 8

C. 10

D. 5

Answer: D



Watch Video Solution

73. A 2 year old child shows stunted growth and slow brain development. He has thin limbs and also shows wasting of muscles. There is

great oedema and swelling present over his body parts. He has very less amount of fat present beneath his skin. Which of the following could be a reason for the development of this condition in him?

A. Replacement of mother's milk by foods

less in total proteins as well as calories

at an early age

B. Replacement of mother's milk by foods

less in total proteins, but having high

calories at an early age

C. Replacement of mother's milk by foods

less in total fats, but having high

calories at an early age

D. Replacment of mother's milk by foods

less in vitamins and minerals, but having

high calories at an early age

Answer: B



Watch Video Solution

74. Select the correct statements regarding the human skeletal from the statements given below:

I. There are a total of 12 ribs in the human skeletal system.

II. Each limb is made up of 30 bones.

III. The axia skeleton consists of 80 bones.

IV. The wrist bones are 8 in number

A. I and II

B. I and III

C. I, III and IV

D. II, III and IV

Answer: D



Watch Video Solution

75. Which of the following joint permits only limited movements ?

A. Joint present between flat skull bones

B. Joint present between adjacent
vertebrae

C. Joint present between humerus and pectoral girdle

D. Knee joint

Answer: B



Watch Video Solution

76. Column - I lists the parts of the human brain and column - II lists the functions. Match the two columns and identify the correct

choice from those given

Column I	Column II
A. Cerebrum	p. Seat of intelligence
B. Cerebellum	q. Receive visual and auditory inputs
C. Hypothalamus	r. Controls the rate of heartbeat
D. Midbrain	s. Controls the pituitary
	t. Maintains body posture

A. A - t, B = r, C = q, D = p

B. A = s, B = t, C = q, D = p

C. A = t, B = s , C = p , D = r

D. A = p , B = t, C = s, D = q

Answer: D



77. Which of the following statement regarding forebrain is correct?

A. Forebrain consists of hypothalamus, thalamus and cerebellum

B. The layer of cells covering the cerebral hemispheres is referred to as white matter.

C. The lobe involved in regulation of sexual behaviour and expression of emotional reaction is also a part of the forebrain.

D. Association areas of the forebrain are sensory in function

Answer: C



Watch Video Solution

78. Which of the following hormone helps in maintaining body temperature, metabolism, pigmentation, and defense capabilities?

A. Melatonin

B. Melanin

C. Thymosis

D. Calcitonin

Answer: A



Watch Video Solution

79. The hormones A and B secreted by Islet of Langerhans cause hyperglycemia and hypoglycemia, respectively

A. A : insulin, B : glucagon

B. A : somatostatin , B : insulin

C. A : glucagon, B : insulin

D. A : insulin B: somatostatin

Answer: C



Watch Video Solution

80. Read the following statements about the parathyroid gland and identify the true and false ones. Select the correct option after referring to the given table.

I. Human beings have a pair of parathyroid glands, situated in each lobe of the thyroid gland.

II. The secretion of PTH is regulated by the levels of circulating calcium ions.

III. PTH is a hypocalcemic hormone.

PTH plays a major role in maintaining calcium balance in the body along with TCT.

A. I - True, II - False, III - True, IV - False

B. I - True, II - True, III - False, IV - True

C. I - False, II - False, III - True, IV - False

D. I - False, II - True, III - False, IV - True

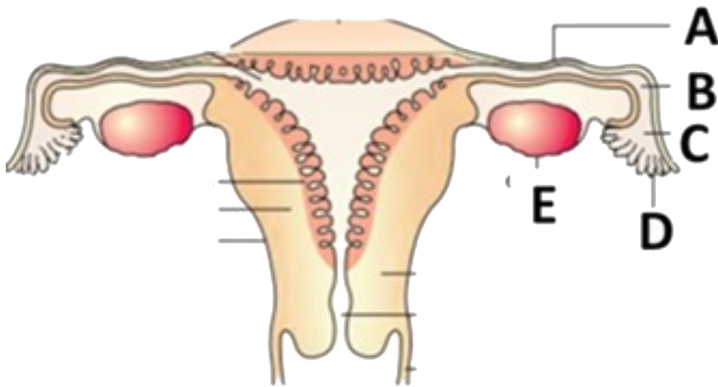
Answer: D



Watch Video Solution

81. Identify the functions/characteristics of parts labelled as A, B, C, D and E in the given diagram. Select the correct option after

referring to the given table.



A. A : Part having a narrow lumen, B : Part where zygote formation occurs, C : Part closest to the ovary, D : Part responsible for transportation of ovum, E : Part responsible for production of ovum

B. A : Part having a narrow lumen, B : Part closest to the ovary, C : Part responsible for transportation of ovum, D : Part where zygote formation occurs, E : Part responsible for production of ovum

C. A : Part responsible for production of ovum, B : Part responsible for transportation of ovum, C : Part where zygote formation occurs, D : Part

closest to the ovary, E : Part having a narrow lumen

D. A : Part where zygote formation occurs,

B : Part responsible for production of

ovum, C : Part responsible for

transportation of ovum, D : Part having a

narrow lumen, E : Part closest to the

ovary

Answer: A



Watch Video Solution

82. Which of the following cells are responsible for the secretion of the hormone that stimulates muscular growth, growth of facial and axillary hair, aggressiveness, low pitch of voice, etc.in males?

A. Cells which form the lining of seminiferous tubules

B. Cells which provide nutrition to the growing spermatozoa

C. cells situated in the interstitial space of
testis

D. Germ cells

Answer: C



Watch Video Solution

83. Which of the following parts of the sperm provides energy for its motility?

A. The head

B. The neck

C. The tail

D. The middle piece

Answer: D



Watch Video Solution

84. Choose the right one among the statements given belowL

- A. IUDs are generally inserted by the user herself
- B. IUDs increase phagocytosis reaction in the uterus
- C. IUDs suppress gametogenesis
- D. IUDs ones inserted need not be replaced

Answer: B



Watch Video Solution

85. which of the following processes is involved in the assisted reproductive technology known as 'GIFT'?

A. Transfer of zygote into the fallopian tube

B. Transfer of zygote into the uterus

C. Transfer of ovum collected from donor to the fallopian tube

D. Transfer of ovum collected from donor to the uterus

Answer: C



Watch Video Solution

86. Identify the organism which causes dry, scaly lesions on the skin, nails and scalp of human is

A. A fungi belonging to genus Neurospora

B. A fungi belonging to genus

Microsporum

C. A bacteria belonging to genus

Streptococcus

D. A bacteria belonging to genus

Mycobacterium

Answer: B



Watch Video Solution

87. Which of the following is an example of a disease caused by the attack of the body on its own cells?

A. Diabetes insipidus

B. Malaria

C. Rheumatoid arthritis

D. Tuberculosis

Answer: C



Watch Video Solution

88. Which of the following drugs is capable of producing a state of euphoria or increased energy ?

- A. Coke obtained from *Erythroxylum coca*
- B. Heroin obtained from *Cannabis sativa*
- C. Charas obtain from *Claviceps purpurea*
- D. Morphine obtained from *Papaver somniferum*

Answer: A



Watch Video Solution

89. Match the microbes given in column I with the major role played by them given in column II and select the correct option from the codes given below.

No.	Column I (Microbes)	No.	Column II (Functions)
I	<i>Propionibacterium sharmanii</i>	A	Produces an immunosuppressive agent
II	<i>Streptococcus</i>	B	Nitrogen fixation in soil
III	<i>Trichoderma polysporum</i>	C	Produce large holes in Swiss cheese
IV	<i>Rhizobium</i>	D	Produces enzyme used as clot-buster

A. I-C, II-A, III-D, IV-B

B. I-C, II-D, III-A, IV-B

C. I-B, II-A, III-D, IV-C

D. I-A, II-C, III-B, IV-D

Answer: B



Watch Video Solution

90. Given below are the steps involved in sewage treatment. Arrange them in proper sequence and select the correct option.

A. Passage of primary effluent into large

aeration tanks for mechanical agitation and pumping of air.

B. Passage of secondary effluent and formation of activated sludge.

C. Physical removal of particles through filtration and sedimentation

D. Release of effluent from the secondary treatment plant into natural water bodies.

E. Growth of useful aerobic microbes into flocs which significantly reduce the BOD.

A. A,C, B, E, D

B. A,B,C,D,E

C. C,A,E,B,D

D. C,E,A,B,D

Answer: C



Watch Video Solution