



## BIOLOGY

### BOOKS - NTA MOCK TESTS

#### NTA NEET SET 87

#### Biology

1. Which of the following is an essential fatty acid ?

- A. Linoleic acid
- B. Linolenic acid
- C. Arachidonic acid
- D. All of these

**Answer: D**

 [Watch Video Solution](#)

2. When the SA node generates an action potential it stimulates the atrial systole , which results in

- A. complete Ventricular filling
- B. Complete emptying of atria
- C. increased flow of blood into the Ventricles by about 30 % , but semilunar valves must be open
- D. increased flow of blood into the Ventricles by about 30 % , but semilunar valves must be closed

**Answer: D**

 [Watch Video Solution](#)

**3. Inspiration occurs when**

- A. the volume of the lung increase while the pressure in the lung decreases
- B. the volume of the lung decreases while the pressure in the lung increases
- C. the volume of the lung increases while the pressure in the lung increases
- D. the volume of the lung decreases while the pressure in the lung decreases

**Answer: A**

 [Watch Video Solution](#)

**4. Second check point of cell cycle lies between**

A.  $G_1$  and  $S$  phase

B.  $S$  and  $S_2$  Phase

C.  $G_2$  and  $M$  phase

D.  $M$  and  $G_1$  Phase

**Answer: C**



**Watch Video Solution**

5. Golgi apparatus is derived from

A. ER

B. mitochondria

C. cell membrane

D. nuclear membrane

**Answer: B**



[Watch Video Solution](#)

6. The gland that stores hormone before its secretion is

- A. the smallest endocrine glands
- B. the largest endocrine glands
- C. the heterocrine glands
- D. the endocrine gland which is considered as the vestigial third eye

**Answer: B**



[Watch Video Solution](#)

7. Around ...% of body weight in adult human is contributed by muscles.

A. 40 %

B. 20 %

C. 16 %

D. 15 %

**Answer: A**



**Watch Video Solution**

**8.** Weismann cut off tails of mice generation after generation but tails neither disappeared nor shortened showing that :

A. Darwin was correct

B. tail is an essential organ

C. Mutation theory is wrong

D. Lamarckism was wrong in explaining inheritance of acquired characters.

**Answer: D**



[Watch Video Solution](#)

9. Person who take drugs intravenously are much more likely to acquire serious infections like

A. AIDS

B. Hepatitis-B

C. cancer

D. both (a) and (b)

**Answer:**



[Watch Video Solution](#)

10. Absence of sperms in semen is called

- A. oligospermia
- B. polyspermia
- C. azoospermia
- D. asthenospermia

**Answer: C**



[Watch Video Solution](#)

11. Oral contraceptive pills help in birth control by

- A. Killing the sperms in uterus
- B. Preventing ovulation
- C. forming barrier between sperm and given



## D. Killing the ovum

Answer: B

 [Watch Video Solution](#)

12. Match the name of the animal (Column I), with one characteristics (column II) and the phylum/class (column III) to which it belongs

Column-I	Column-II	Column-III
(a) Adamsia	radially symmetrical	Porifera
(b) Petromyzon	ectoparasite	Cyclostomata
(c) Ichthyophis	terrestrial	Reptilia
(d) Limulus	body covered by chitinous exoskeleton	Pisces

A.

Column I      Column II      Column III  
Limulus      Body covered by chitinous exoskeleton      Pisces

B.  
Column I      Column II      Column III  
Adamsia      Radially symmetrical      Proifera

C.  
Column I      Column II      Column III  
Petromyzon      Ectoparasite      Cyclostomata

	Column I	Column II	Column III
D.	Ichthyphis	Terrstria	Reptilia

**Answer: C**

 [Watch Video Solution](#)

**13.** A person with folic acid deficiency will have erythrocytes which are

- A. immature and larger than normal erythrocytes
- B. immature and smaller than normal erythrocytes
- C. mature and larger than normal erythrocytes
- D. mature and smaller than normal erythrocytes

**Answer: A**

 [Watch Video Solution](#)

14. The counter current mechanism involves the transport of .....to maintain the concentration of.....in medullary interstitium.

- A. NaCl and urea
- B. KCl and glucose
- C. NaCl and water
- D. Urea and water

**Answer: A**

 [Watch Video Solution](#)

15. The major relay station for sensory input that projects to the cerebral cortex is the

- A. Pons
- B. thalamus

C. Cerebellum

D. hypothalamus

**Answer: B**



**Watch Video Solution**

**16.** Read the following statements and find out the INCORRECT statement.

A. Cockroach has mosaic vision.

B. In Cockroach , brain supplied nerves to antennae and compound eyes.

C. Fat body , nephrocytes and uricose glands also helps in excretion in cockroach.

D. Male cockroach bears one ootheca that is a dark reddish to blackish brown capsule , about  $3/8$  (8mm long).

**Answer: D**

 [Watch Video Solution](#)

17. Mark the correct option w.r.t rate of reaction.

A.  $rate = \delta P / \delta t$

B.  $rate = \beta P / \beta t$

C.  $rate = \mu T / \mu P$

D.  $rate = \beta t / \beta P$

**Answer: A**

 [Watch Video Solution](#)

**18.** A completely four-chambered heart is present in

- A. all reptiles. all birds and all mammals
- B. Some reptiles , all birds and all .mammals
- C. no reptiles , all birds and all mammals
- D. Some reptiles, some birds and all mammals

**Answer: B**



**Watch Video Solution**

**19.** Wheezing occurs in

- A. Asthma
- B. Emphysema
- C. Silicosis
- D. Asbestosis

**Answer: A**

 [Watch Video Solution](#)

20. How many chromosomes will the diploid cell have at G<sub>1</sub> after S and after M - phase respectively if the haploid cell has 7 chromosomes ?

- A. 7,7,14
- B. 7,14,14
- C. 14,14,14
- D. 7,7,7

**Answer: C**

 [Watch Video Solution](#)

21. Which cell organelle is absent in the leaves of onion ?

- A. Nucleus
- B. Cell wall
- C. Centriole
- D. Endoplasmic reticulum

**Answer: C**



[Watch Video Solution](#)

22. The releasing hormones are produced by

- A. thymus
- B. pituitary
- C. hypothalamus



D. Pancreas

**Answer: C**

 [Watch Video Solution](#)

**23.** Neural canal is located in

A. cranium

B. Skull

C. vertebra

D. spinal cord

**Answer: C**

 [Watch Video Solution](#)

**24.** Read the following statements and select the correct option.

(i) Increase in retained months after industrialisation in Great Britain is a proof for natural selection.

(ii) When more individuals of a population acquire a mean character value, it is called disruption.

(iii) Changes in allelic frequency in a population will lead to Hardy-Weinberg equilibrium.

(iv) Genetic drift changes the existing gene or allelic frequency in future generations.

A. Only ii is correct

B. Only i ,iv are correct

C. Only i ,ii are correct

D. Only i ,iii are correct

**Answer: B**

 [Watch Video Solution](#)

25. Antibody molecule is Y shaped. The two tips of this Y shaped molecule bind to antigen through which type of interaction /bond ?

A. Non-covalent interaction

B. Disulfide bonds

C. Covalent interaction

D. Peptide bond

**Answer: A**

 [Watch Video Solution](#)

26. The first meiotic division during oogenesis is completed at the stage of

A. Primary oocyte within primary follicle

B. Secondary oocyte within secondary follicle

C. Primary oocyte within tertiary follicle

D. Secondary oocyte within tertiary follicle

**Answer: C**



**Watch Video Solution**

27. Family planning was initiated in .....(A) .....to attain .....(B)..... as a social goal.

A. A : 1951, B : total reproductive health

B. A : 1961, B : total reproductive health

C. A : 1971, B : total mental health

D. A : 1931, B : total physiological health

**Answer: A**

 [Watch Video Solution](#)

28. In which of the following organisms, self-fertilization is seen?

- A. Fish
- B. Roundworm
- C. Earthworm
- D. Liver fluke

**Answer: A**

 [Watch Video Solution](#)

29. A person with chronic kidney failure will have

- A. high blood urea and high serum creatinine levels
- B. high blood urea and low serum creatinine levels

C. low blood urea and high serum creatinine levels

D. low blood urea and low serum creatinine levels

**Answer: A**



[Watch Video Solution](#)

**30.** The nerve impulses are transmitted by the optic nerves to the ...  
area of the brain .

A. Wernicke's area

B. Motor area

C. Visual cortex area

D. auditory area

**Answer: C**



[Watch Video Solution](#)

31. Which of the following is the one common feature found in all types of connective tissue despite their variation in different aspects ?

- A. Tough collagenous fibres
- B. Elasticity and strength
- C. Abundant matrix
- D. Vascularity

**Answer: C**

 [Watch Video Solution](#)

32. Enzymes that catalyse the removal of groups from the substrates by a mechanism other than hydrolysis are called

A. Transferase

B. Lyases

C. Isomerases

D. Ligases

**Answer: B**



**Watch Video Solution**

**33.** Which of the following subcellular structures cannot be isolated ?

A. nuclei

B. lysosomes

C. Mitochondria

D. endoplasmic reticulum



**Answer: D**

 [Watch Video Solution](#)

**34.** The hormones that initiate ejection of milk, stimulates milk production and growth of ovarian follicles are respectively known as

- A. PRL, OT and LH
- B. PRH, OT and LH
- C. OT, PRL and FSH
- D. LH, PRL and FSH

**Answer: C**

 [Watch Video Solution](#)

**35.** Choose the correct match from the following .

- A. Giraffes with long necks - Lamarck
- B. Branching descent - Malthus
- C. Mutation cause speciation - Darwin
- D. Inheritance factors influence phenotype - de Vries

**Answer: A**



**Watch Video Solution**

**36.** The carrier for amoebiasis is

- A. Entamoeba histolytica
- B. Mosquito
- C. Musca
- D. Plasmodium vivax

**Answer: C**



[Watch Video Solution](#)

37. The main cause of the disintegration of the endometrial lining

- A. LH surge
- B. degeneration of corpus luteum
- C. ovulation during mid-cycle
- D. implantation leads to pregnancy

**Answer: B**



[Watch Video Solution](#)

38. How many different types of genetically different gametes will be produced by a heterozygous plant having the genotype AABb Ccdd ?

- A. Two

B. Four

C. Eight

D. Sixteen

**Answer: B**



**Watch Video Solution**

**39.** How many (in number) of the following properties are the defining characteristics of living organisms? Growth, reproduction, metabolism, cellular organisation, Consciousness

A. Two

B. Three

C. Four

D. Five

**Answer: B**

 [Watch Video Solution](#)

**40.** Which of the following statements is incorrect about metagenesis?

- A. Alternation of asexual and sexual phases in the life cycle of Obelia is called Metagenesis
- B. Metagenesis is similar to alternation of generations as found plants
- C. Both the medusa and polyp are diploid
- D. Medusa is the sexual phase and polyp is the asexual phase

**Answer: B**

 [Watch Video Solution](#)

**41.** Gene therapy involves

- A. introduction of a normal genes in cell
- B. treating of defective genes with radiation
- C. eliminating defective and useless genes
- D. replacement of defective genes by normal

**Answer: D**



**Watch Video Solution**

**42.** If a person obtains transformants by inserting a recombinant DNA within the coding sequence of enzyme  $\beta$ -galactosidase, he will separate out recombinants from non-recombinants by which of the following observations ?

- A. non-recombinant colonies do not produce any colour ,  
whereas recombinant from blue coloured colonies
- B. recombinant colonies do not produce any colour, whereas non-recombinant from blue coloured colonies
- C. recombinant and non-recombinant both produce blue coloured colonies
- D. no colonies are formed due to inspectional inactivation

**Answer: B**



**Watch Video Solution**

**43.** Consider the following for statements (1 - 4 ), select the correct option starting which ones are true (T) and which ones are false (F)

(1) An organism at each trophic level depends on those at a higher energy demands.

(2) Each trophic level has a certain mass of living material at a particular time called standing state .

(3) Each trophic level has a certain mass of non-living material at a particular time called standing state .

(4) The number of trophic levels in a grazing food chain is not restricted.

A. 1-T , 2 - T , 3 - F , 4 -F

B. 1- F , 2 - T , 3 - F , 4 -T

C. 1- T , 2 - F , 3 - T , 4 -F

D. 1- F , 2 - T , 3 - T , 4 -F

**Answer: D**



**Watch Video Solution**

**44.** A scrubber in the exhaust of a chemical industrial plant removes:



- A. Particular matter of the size 2.5 micrometer or less
- B. gases like sulphur dioxide
- C. Particulate matter of the size 5 micrometer or above
- D. gases like ozone and methane

**Answer: B**

 [Watch Video Solution](#)

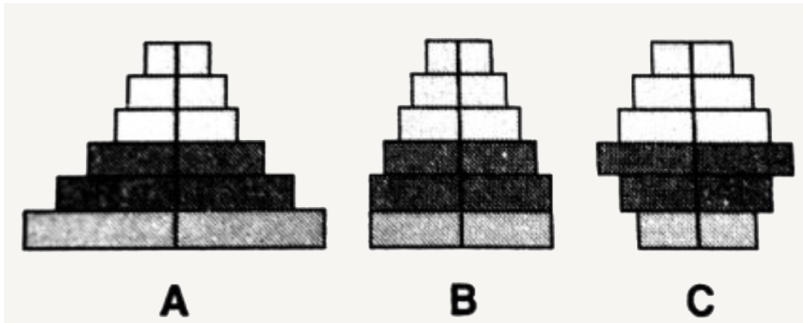
**45.** Which of the following step of translation does not consume a high energy phosphate bond

- A. Translocation
- B. Amino acid activation
- C. Peptidyl transferase reaction
- D. Aminoacyl tRNA binding to A-site

Answer: C

 Watch Video Solution

46. Representation of age pyramids for the human population is given below. Identify A, B, and C by selecting the correct option .



- A. *A*      *B*      *C*  
Declining   Stable   Expanding
- B. *A*      *B*      *C*  
Stable   Expanding   Declining
- C. *A*      *B*      *C*  
Expanding   Stable   Declining
- D. *A*      *B*      *C*  
Stable   Declining   Expanding

Answer: C

 [Watch Video Solution](#)

47. A heterozygous father suffers from an autosomal dominant trait.

Which of these statements is true ?

- A. All sons will suffer from the disease while the daughters will not suffer from the disease
- B. All daughters will suffer from the disease while the sons will not suffer from the disease
- C. None of his children will suffer from the disease
- D. Some of his children may suffer from the disease

**Answer: D**

 [Watch Video Solution](#)

48. Stolon is a type of vegetative propagule which is majorly observed in strawberries . It is a modified

- A. Sun-aerial stem
- B. Underground stem
- C. aerial stem
- D. root

**Answer: A**

 [Watch Video Solution](#)

49. During the complete oxidation of glucose, the proportion of ATP formed by substrate-level phosphorylation is ....

- A. 100 %
- B. 89.5 %

C. 10.5 %

D. 50 %

**Answer: C**

 [Watch Video Solution](#)

**50.** Which of these examples will have the steepest curve when log of species richness and log of area are plotted on a graph?

A. plants in Britain

B. birds in California

C. molluscs in New York State

D. mammals in the tropical forests of different continents

**Answer: D**

 [Watch Video Solution](#)

51. Which of the following is not the application of transgenic animals ?

- A. Developing animals specially created for use in xenografting
- B. Molecular diagnosis of pathogens such as detecting presence of antigens their protein or glycoproteins, etc.
- C. To test genetically engineered hormones to increase milk ,meat production , etc .
- D. To rest pharmaceutical proteins, drugs production etc.

**Answer: B**



**Watch Video Solution**

52. The inheritance pattern of a gene over generations among human is studied by the pedigree analysis. Character studied in the pedigree analysis is equivalent to

- A. Quantitative trait
- B. Mendelian trait
- C. Polygenic trait
- D. Maternal trait

**Answer: B**

 [Watch Video Solution](#)

53. Electroporation involves

- A. Promotion of seed germination by induced imbibitions of water with electric current

- B. Making transient pores in cell membrane to facilitate entry of gene constructs
- C. Purification of saline water with the help of an artificial membrane
- D. Passage of sucrose through sieve pores by electroosmosis.

**Answer: B**



[Watch Video Solution](#)

**54.** In a detritus food chain, decomposition of detritus depends upon all, except

- A. Oxygen non-availability
- B. Chemical composition of detritus
- C. temperature and soil moisture



D. soil microbes

**Answer: A**

 [Watch Video Solution](#)

**55.** Which of the following is a useful indicator of eutrophication ?

A. BOD

B. CFC

C. DDT

D. 2, 4-D

**Answer: A**

 [Watch Video Solution](#)

56. Match column I with column II and select the CORRECT option

	Column I		Column II
(i)	Helicase	P.	Stabilises ssDNA
(ii)	Single-stranded binding protein	Q.	Release tension in uncoiled DNA
(iii)	Topoisomerase	R.	Synthesizes primers
(iv)	Primase	S.	Unwinds DNA strands

A. (i) - P , (ii) - R ,(iii) - Q ,(iv) - S

B. (i) - Q , (ii) - R ,(iii) - P ,(iv) - S

C. (i) - S , (ii) - P ,(iii) - Q ,(iv) - R

D. (i) - S , (ii) - Q ,(iii) - R ,(iv) - P

**Answer: C**



**Watch Video Solution**

57. What would be the blood group of a father who has a child suffering from erythrocytosis foetalis ?

- A. Father's blood group is definitely Rh-ve
- B. Father's blood group is definitely Rh+ve
- C. Father's blood group may be definitely Rh+ve or Rh-ve
- D. Father's blood group is definitely O Rh-ve

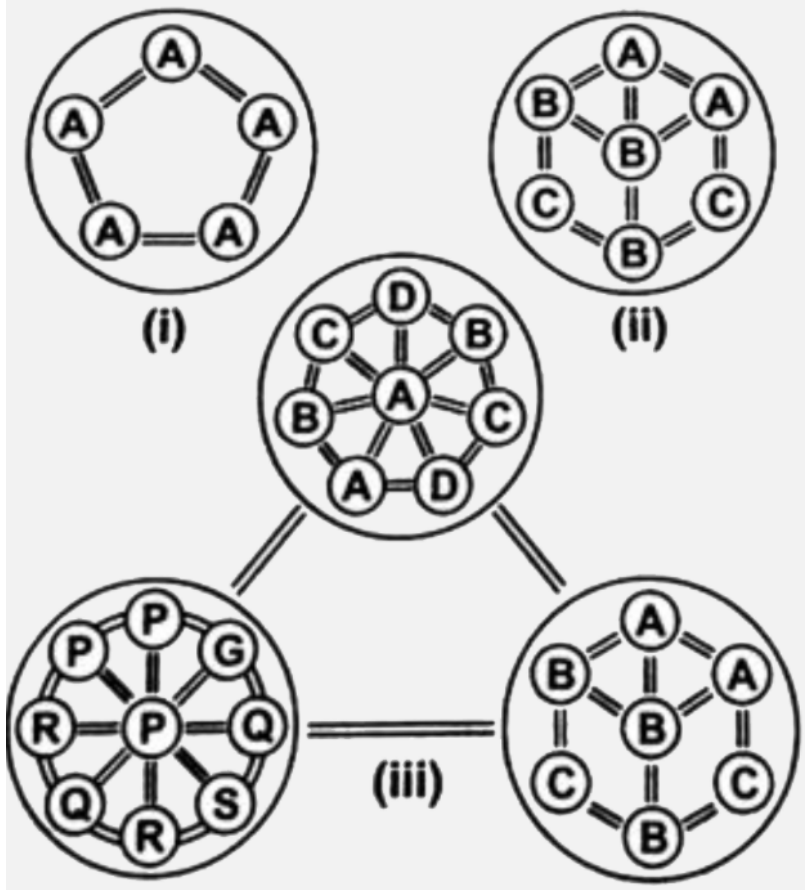
**Answer: B**



**Watch Video Solution**

58. Different species are represented by A, B, C, D, G, P, Q, R and S .

Which of the following represents a community ?



A. (i)

B. (ii)

C. (iii)

D. both (ii) and (iii)

**Answer: B**

 [Watch Video Solution](#)

59. Which of the following cellular metabolic processes can occur both in the presence or absence of  $O_2$ ?

A. Glucolysis

B. Fermentation

C. TCA cycle

D. Electro transport coupled with chemiosmosis

**Answer: A**

 [Watch Video Solution](#)

60. This bird has become recently extinct from



A. India

B. Mauritius

C. Australia

D. Maldives

**Answer: B**

 [Watch Video Solution](#)

61. A colour blind man marries with a daughter of colour blind father, generation will be

- A. There will be no daughter colourblind
- B. All sons will be colourblind
- C. All daughter will be colourblind
- D. Half sons will be colourblind

**Answer: D**

 [Watch Video Solution](#)

62. Find the correct Statement .

A. Ori means origin transcription

B. Some bacterial cell may have copy number of plasmids vary from 15-100

C. Vector should have many recognition sites for commonly used restriction enzyme so that alien DNA can attach to any one of the sites easily .

D.  $tet^R$  gene in pBR322 can be cleaved by pvu I and Pst I.

**Answer: B**



**Watch Video Solution**

63. Which one is not correctly matched ?

A. Productivity - rate of biomass production



B. Gross primary productivity - photoautotrophs

C. Net primary productivity - available biomass for consumption

D. Secondary productivity - formation of new organic matter is  
producer

**Answer: D**



**Watch Video Solution**

**64.**  $T\psi C$  loop of tRNA is called :

A. 'Most specify' part of tRNA

B. Enzyme attachment site

C. Ribosomal attachment site

D. Aminoacyl attachment site

**Answer: C**



Watch Video Solution

65. If four o' clock plants, the gene for red flower colour (R) is incompletely dominant over the gene for white flower colour (r), hence the plants heterozygous for flower colour (Rr) have pink flower. What will be the ratio of offsprings in a cross between the red flowers and pink flowers ?

- A. 75% red flowers , 25. pink flowers
- B. All red flowers
- C. 50% red flowers , 50% pink flowers
- D. Red : pink : white 1 : 2 : 1

**Answer: C**



Watch Video Solution

**66.** From the statements given below :-

choose option that is true for a tropical female gametophyte of a flowering plant:

- i. It is 8-nucleate and 7-celled at maturity.
- ii. In majority of the angiosperms, it is monosporic.
- iii. It is situated inside the integument but outside the nucellus.
- IV. It had an egg apparatus situated at the micropyle end.
- V. It develops by mitosis of the 4 cells of megaspore tetrad.

A. i, iii and iv

B. ii, iii and iv

C. i, ii and iv

D. i, iii and iv

**Answer: C**



**Watch Video Solution**

**67.** Radial vascular bundles characteristically occur in

- A. monocot and dicot stems .
- B. monocot and dicot leaves .
- C. monocot and dicot roots.
- D. all of these

**Answer: C**



**Watch Video Solution**

**68.** Phylum Protozoa is classified on the basis of

- A. Mode of reproduction
- B. Locomotory organelles
- C. made of nutrition

D. None of these

**Answer: B**

 [Watch Video Solution](#)

**69.** Select the wrong match :

A. Castor seeds - Dicot and endospermic

B. Bean - Dicot and endospermic

C. Maize - Monocot and endospermic

D. Mustard - Dicot and endospermic

**Answer: D**

 [Watch Video Solution](#)

70. Read the following statements and find out the incorrect statement.

- A. Algae usually reproduce vegetatively by fragmentation , asexually by formation of different types of spores and sexually by formation of gemmates.
- B. Algae are classified into three classes , pteridophytes into four classes and angiosperm into two classes .
- C. Algae are chlorophyll bearing simple thalloid , autotrophic and largely aquatic organisms .
- D. The plant body of algae is more differentiated than that of bryophytes.

**Answer: D**

 [Watch Video Solution](#)

71. *Monascus purpureus* is a yeast used commercially in the production of

- A. streptokinase for removing clots from the blood vessels.
- B. citric acid.
- C. blood cholesterol - lowering statins.
- D. ethanol

**Answer: C**

 [Watch Video Solution](#)

72. Statement -1 : The innermost layer of microsporangium is tapetum.

Statement -2 : Glandular tapetum provides nourishment to developing microspores.

- A. Only statement -1 is correct .
- B. Only statement -2 is correct
- C. Both statement 1 & 2 is correct
- D. Both statement 1 & 2 is incorrect.

**Answer: C**



**Watch Video Solution**

**73.** The hormone responsible for nutrient mobilization which helps in the delay of leaf senescence is

- A. auxin.
- B. gibberellin
- C. cytokinin
- D. ethylene



**Answer: C**

 [Watch Video Solution](#)

**74.** The products of the photochemical reaction are :

A.  $O_2$  , ATP and NADPH

B. Glucose and  $O_2$

C. ATP and NADPH

D. Organic compounds especially carbohydrates

**Answer: A**

 [Watch Video Solution](#)

**75.** Growth plotted against time gives a

A. Parabolic curve

B. Sigmoid curve

C. Upright line

D. Horizontal line

**Answer: B**



**Watch Video Solution**

**76.** Root pressure is absent in

A. rapidly transpiring plants.

B. conifers.

C. plant growing in cold soils.

D. all of the above

**Answer: D**



Watch Video Solution

77. Match the columns and choose the CORRECT option.

1. Totipotency	(a) Breeding crops with higher levels of nutrients.
2. Micropropagation	(b) Plant grown from a hybrid protoplast.
3. Somatic hybrid	(c) Producing a large number of plants through tissue culture.
4. Biofortification	(d) Capacity to generate.

A. 1-d,2-c,3-a,4-b

B. 1-a,2-c,3-b,4-d

C. 1-c,2-b,3-a,4-d

D. 1-d,2-c,3-b,4-a

**Answer: D**



Watch Video Solution

78. In endarch condition of xylem, metaxylem lies.....of protoxylem

- A. on outer side
- B. on inner side
- C. both on inner and outer side
- D. in centre

**Answer: A**



[Watch Video Solution](#)

79. Plasmogamy is fusion of

- A. Two haploid cells including their nuclei
- B. Two haploid cells without nuclear fusion
- C. Sperm and egg

D. Sperm and two polar nuclei

**Answer: B**

 [Watch Video Solution](#)

**80.** A characteristic of drupe is

A. stony mesocarp

B. stony endocarp

C. fleshy seed coat.

D. stony pericarp

**Answer: B**

 [Watch Video Solution](#)

81. Which of the following is an example of heterosporous pteridophyte ?

A. Selaginella

B. Salvinia

C. Salvia

D. Both (A) and (B)

**Answer: D**



**Watch Video Solution**

82. If BOD of sample water is very high, the sample is

A. highly polluted.

B. less polluted

C. not polluted.

D. potable.

**Answer: A**

 [Watch Video Solution](#)

**83.** What is the direction of micropyle in anatropous ovule?

A. Upward

B. Downward

C. Right

D. Left

**Answer: B**

 [Watch Video Solution](#)

84. Select the incorrect pairing.

A.  $C_3$  - Example maize

B.  $C_4$  - Structure : Kranz anatomy

C. Calvin cycle - First stable product PGA

D. Hatch & Slack cycle - First stable product OAA

**Answer: A**



[Watch Video Solution](#)

85. Which of the following is correct about growth?

A. Growth is regarded as one of most fundamental and conspicuous characteristics of living being.



- B. Growth can be defined as an irreversible permanent increases in size of an organ or its parts or even of an individual cell.
- C. Generally , growth is accompanied by metabolic processes (both anabolic and catabolic), that occur at the expense of energy.
- D. All of the above

**Answer: A**

 [Watch Video Solution](#)

**86.** Nucleolus is :

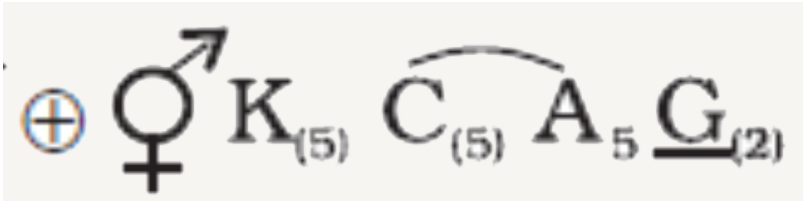
- A. Rounded structure found in cytoplasm near nucleus
- B. Rounded structure inside nucleus and having rRNA
- C. Rod - shaped structure in cytoplasm near the nucleus

D. None of the above

**Answer: B**

 [Watch Video Solution](#)

87. The given floral formula corresponds to :



A. Sunhemp

B. Belladonna

C. Tulip

D. Soyabean

**Answer: B**

 [Watch Video Solution](#)

88. After penetrating stigmatic and stylar tissue, the pollen tube usually grows downwards towards egg because

- A. It has no other passage to follow
- B. It grows under the control of egg nucleus
- C. The egg cell attracts the pollen tubes as they have dissimilar electric charge
- D. The filiform apparatus of synergids are believed to attract the pollen tubes

**Answer: D**

 [Watch Video Solution](#)

89. Which of the following statement is correct ?

A. All bacteria are heterotrophic

B. Bacteria are either heterotrophic, chemoautotrophic

C. Bacteria are either heterotrophic, chemoautotrophic or photoautotrophic

D. Bacteria are either chemoautotrophic or photoautotrophic

**Answer: C**



[Watch Video Solution](#)

**90.** In a fertilised embryo sac, the haploid, diploid and triploid structures are

A. Antipodal, zygote and primary endosperm nucleus

B. Synergid, antipodal and polar nuclei

C. Antipodal, synergid and primary endosperm nucleus

D. Synergid, polar nuclei and zygote

**Answer: A**



**Watch Video Solution**