

Ques No.

Question

1

JEE MAINS MATHS SOLUTIONS - 2007

In a geometric progression consisting of positive terms, each term equals the sum of the next two terms. Then the common ratio of this progression equals (1) $\frac{1}{2}(1 - \sqrt{5})$ (2) $\frac{1}{2}\sqrt{5}$ (3) $\sqrt{5}$ (4) $\frac{1}{2}(\sqrt{5} - 1)$

[▶ Watch Free Video Solution on Doubtnut](#)

2

JEE MAINS MATHS SOLUTIONS - 2007

If $\sin^{-1}\left(\frac{x}{5}\right) + \operatorname{cosec}^{-1}\left(\frac{5}{4}\right) = \frac{\pi}{2}$ then the value of x is: (1) 1 (2) 3 (3) 4 (4) 5

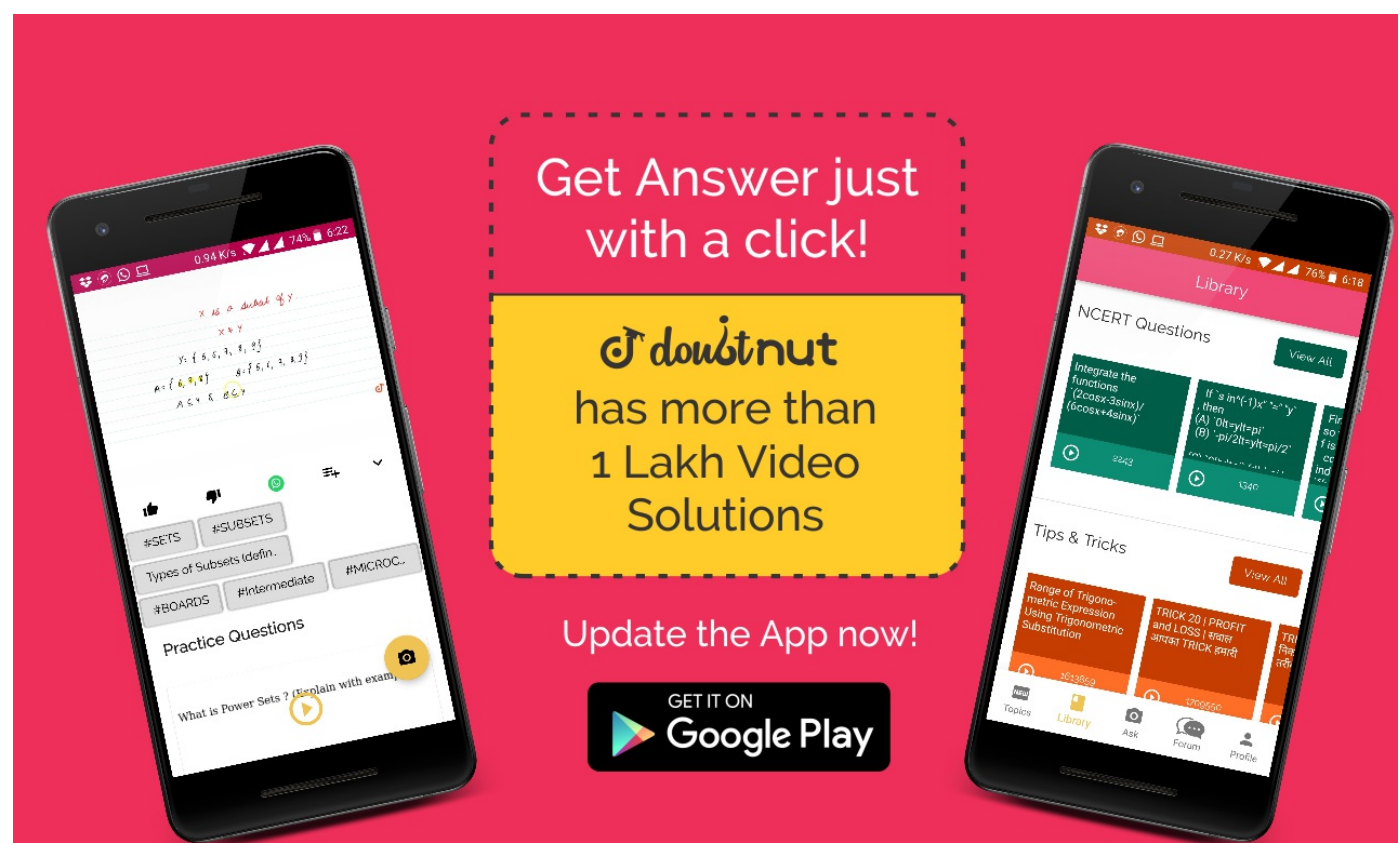
[▶ Watch Free Video Solution on Doubtnut](#)

3


JEE MAINS MATHS SOLUTIONS - 2007

In the binomial expansion of $(a - b)^n$, $n \geq 5$, the sum of 5th and 6th terms is zero, then $\frac{a}{b}$ equals (1) $\frac{5}{n-4}$ (2) $\frac{6}{n-5}$ (3) $\frac{n-5}{6}$ (4) $\frac{n-4}{5}$


[▶ Watch Free Video Solution on Doubtnut](#)



Get Answer just with a click!

 **doubt nut**
has more than 1 Lakh Video Solutions

Update the App now!

GET IT ON 

4

JEE MAINS MATHS SOLUTIONS - 2007

The set $S = \{1, 2, 3, \dots, 12\}$ is to be partitioned into three sets A, B, C of equal size.

Thus,

$$A \cup B \cup C = S, A \cap B = B \cap C = A$$

$$\cap C = \varphi$$

. The number of ways to partition S is (1) $\frac{12!}{3!(4!)^3}$ (2) $\frac{12!}{3!(3!)^4}$ (3) $\frac{12!}{(4!)^3}$ (4) $\frac{12!}{(4!)^4}$

[▶ Watch Free Video Solution on DoubtNut](#)

5

JEE MAINS MATHS SOLUTIONS - 2007

The largest interval lying in $\left(-\frac{\pi}{2}, \frac{\pi}{2}\right)$ for which the function

$$\left[f(x) = 4^{-x} \cdot 2 + \cos^{-1}\left(\frac{x}{2} - 1\right) \right.$$

$$\left. + \log(\cos x) \right]$$

is defined, is (1) $[0, \pi]$ (2) $\left(-\frac{\pi}{2}, \frac{\pi}{2}\right)$ (3) $\left[-\frac{\pi}{4}, \frac{\pi}{2}\right)$ (4) $\left[0, \frac{\pi}{2}\right)$

[▶ Watch Free Video Solution on DoubtNut](#)

6

JEE MAINS MATHS SOLUTIONS - 2007

A body weighing 13 kg is suspended by two strings 5 m and 12 m long, their other ends being fastened to the extremities of a rod 13 m long. If the rod be so held that the body hangs immediately below the middle point. The tensions in the strings are (1) 12 kg and 13 kg (2) 5 kg and 5 kg (3) 5 kg and 12 kg (4) 5 kg and 13 kg

[▶ Watch Free Video Solution on DoubtNut](#)

7

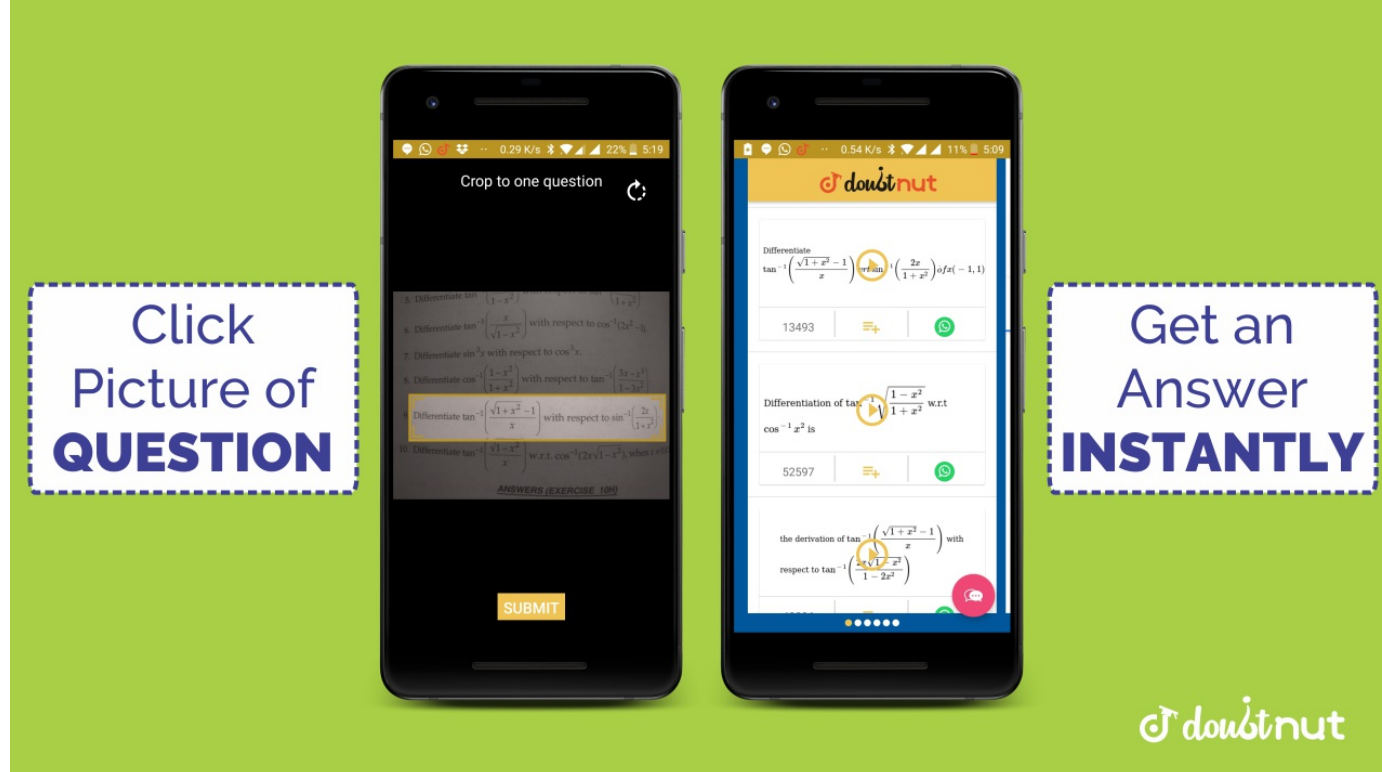
JEE MAINS MATHS SOLUTIONS - 2007

A pair of fair dice is thrown independently three times. The probability of getting a score of exactly 9 twice is (1) $\frac{1}{729}$ (2) $\frac{8}{9}$

(3) $\frac{8}{729}$

(4) $\frac{8}{243}$

[▶ Watch Free Video Solution on DoubtNut](#)



8

JEE MAINS MATHS SOLUTIONS - 2007

Consider a family of circles which are passing through the point $(-1, 1)$ and are tangent to x-axis. If (h, k) are the co-ordinates of the centre of the circles, then the set of values of k is given by the interval (1) $0 < k <$ (2) $k \geq$ (3) $-\infty < k \leq$ (4) $k \leq$

[▶ Watch Free Video Solution on Doubtnut](#)

9

JEE MAINS MATHS SOLUTIONS - 2007

Let L be the line of intersection of the planes $2x + 3y + z = 1$ and $x + 3y + 2z = 2$. If L makes an angles α with the positive x-axis, then $\cos\alpha$ equals

[▶ Watch Free Video Solution on Doubtnut](#)

10

JEE MAINS MATHS SOLUTIONS - 2007

The differential equation of all circles passing through the origin and having their centres on the x-axis is (1) $x^2 = y^2 + xy \frac{dy}{dx}$ (2) $x^2 = y^2 + 3xy \frac{dy}{dx}$ (3) $y^2 = x^2 + 2xy \frac{dy}{dx}$ (4) $y^2 = x^2 - 2xy \frac{dy}{dx}$

[▶ Watch Free Video Solution on Doubtnut](#)

11

JEE MAINS MATHS SOLUTIONS - 2007

If p and q are positive real numbers such that $p^2 + q^2 = 1$, then the maximum value of $(p + q)$ is (1) 2 (2) $1/2$ (3) $\frac{1}{\sqrt{2}}$ (4) $\sqrt{2}$

[▶ Watch Free Video Solution on Doubtnut](#)



12

JEE MAINS MATHS SOLUTIONS - 2007

A tower stands at the centre of a circular park. A and B are two points on the boundary of the park such that $AB (= a)$ subtends an angle of 60° at the foot of the tower, and the angle of elevation of the top of the tower from A or B is 30° . The height of the tower is (1) $\frac{2a}{\sqrt{3}}$ (2) $2a\sqrt{3}$ (3) $\frac{a}{\sqrt{3}}$ (4) $a\sqrt{3}$

[▶ Watch Free Video Solution on DoubtNut](#)

13

JEE MAINS MATHS SOLUTIONS - 2007

The sum of the series
 ${}^{20}C_0 - {}^{20}C_1 + {}^{20}C_2 - {}^{20}C_3 + \dots - \dots$
 $+ {}^{20}C_{10}$
 is:

[▶ Watch Free Video Solution on DoubtNut](#)

14

JEE MAINS MATHS SOLUTIONS - 2007

The normal to a curve at $P(x, y)$ meets the x-axis at G. If the distance of G from the origin is twice the abscissa of P, then the curve is a (1) ellipse (2) parabola (3) circle (4) hyperbola

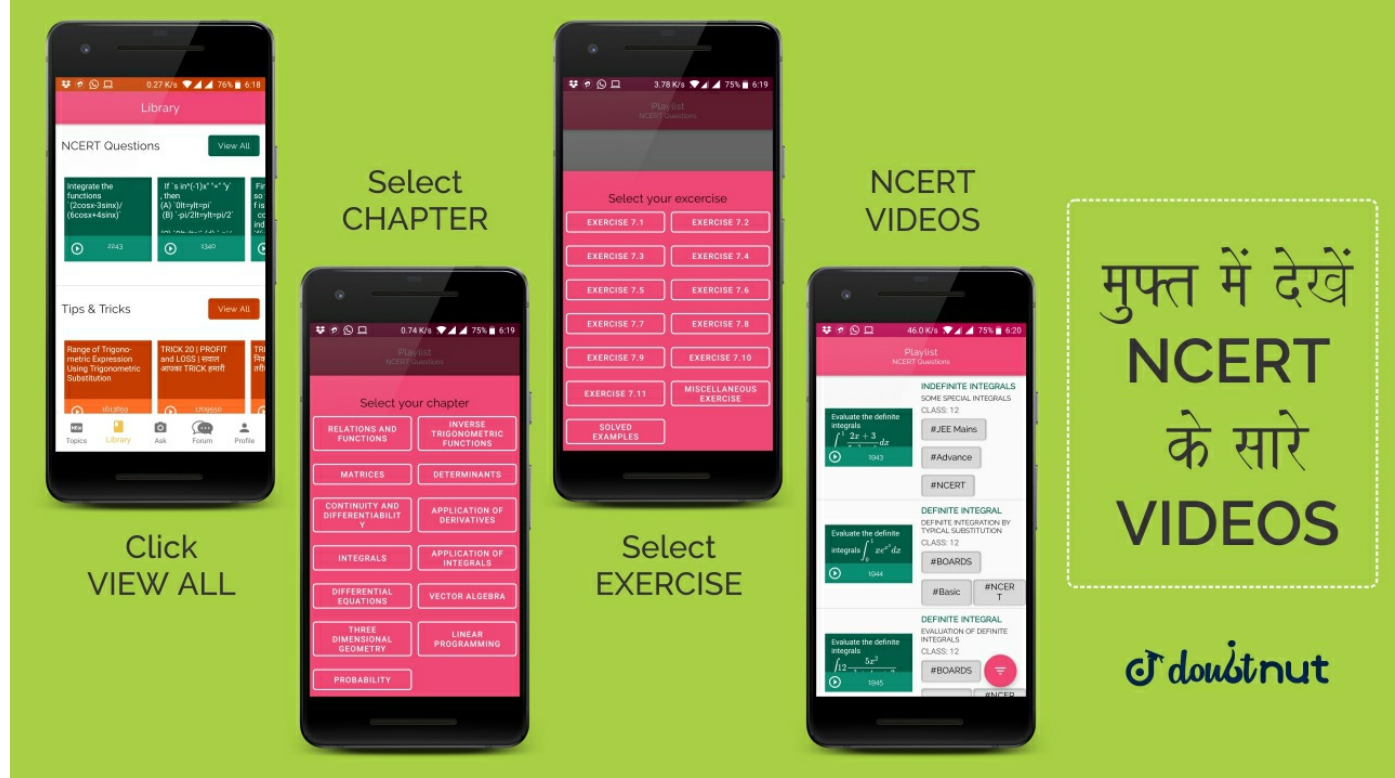
[▶ Watch Free Video Solution on DoubtNut](#)

15

JEE MAINS MATHS SOLUTIONS - 2007

If $|z + 4| \leq 3$, then the maximum value of $|z + 1|$ is (1) 4 (B) 10 (3) 6 (4) 0

[▶ Watch Free Video Solution on DoubtNut](#)



16

JEE MAINS MATHS SOLUTIONS - 2007

The resultant of two forces P N and 3 N is a force of 7 N. If the direction of 3 N force were reversed, the resultant would be $\sqrt{19}$ N. The value of P is (1) 5 N (2) 6 N (3) 3N (4) 4N

[▶ Watch Free Video Solution on Doubt nut](#)

17

JEE MAINS MATHS SOLUTIONS - 2007

Two aeroplanes I and II bomb a target in succession. The probabilities of I and II scoring a hit correctly are 0.3 and 0.2, respectively. The second plane will bomb only if the first misses the target. The probability that the target is hit by the second plane is (1) 0.06 (2) 0.14 (3) 0.2 (4) 0.7

[▶ Watch Free Video Solution on Doubt nut](#)

18

JEE MAINS MATHS SOLUTIONS - 2007

If $D = |11111 + x1111 + y|$ for $x \neq 0, y \neq 0$ then D is (1) divisible by neither x nor y (2) divisible by both x and y (3) divisible by x but not y (4) divisible by y but not x

[▶ Watch Free Video Solution on Doubt nut](#)

19

JEE MAINS MATHS SOLUTIONS - 2007

For the hyperbola $\frac{x^2}{\cos^2 \alpha} - \frac{y^2}{\sin^2 \alpha} = 1$, which of the following remains constant when α varies? (1) eccentricity (2) directrix (3) abscissae of vertices (4) abscissae of foci

[▶ Watch Free Video Solution on Doubt nut](#)



FREE VIDEOS OF PREVIOUS YEAR EXAM PAPERS

**JEE ADVANCED | JEE MAINS
12 BOARD | 10 BOARDS**

Made by  सिर्फ आपके लिए

20

JEE MAINS MATHS SOLUTIONS - 2007

If a line makes an angle of $\frac{\pi}{4}$ with the positive directions of each of x-axis and y-axis, then the angle that the line makes with the positive direction of the z-axis is (1) $\frac{\pi}{6}$ (2) $\frac{\pi}{3}$ (3) $\frac{\pi}{4}$ (4) $\frac{\pi}{2}$

[▶ Watch Free Video Solution on Doubtnut](#)

21

JEE MAINS MATHS SOLUTIONS - 2007

A value of C for which the conclusion of Mean Value Theorem holds for the function $f(x) = (\log)_e x$ on the interval $[1, 3]$ is (1) $2(\log)_3 e$ (2) $\frac{1}{2}(\log)_e 3$ (3) $(\log)_3 e$ (4) $(\log)_e 3$

[▶ Watch Free Video Solution on Doubtnut](#)

22

JEE MAINS MATHS SOLUTIONS - 2007

The function $f(x) = \tan^{-1}(\sin x + \cos x)$ is an increasing function in (1) $\left(\frac{\pi}{4}, \frac{\pi}{2}\right)$ (2) $\left(-\frac{\pi}{2}, \frac{\pi}{4}\right)$ (3) $\left(0, \frac{\pi}{2}\right)$ (4) $\left(-\frac{\pi}{2}, \frac{\pi}{2}\right)$

[▶ Watch Free Video Solution on Doubtnut](#)

23

JEE MAINS MATHS SOLUTIONS - 2007

Let $A = [55\alpha\alpha0\alpha5\alpha005]$ If $|A^2| = 25$, then $|\alpha|$ equals (1) 5^2 (2) 1 (3) $1/5$ (4) 5

[▶ Watch Free Video Solution on Doubtnut](#)



24

JEE MAINS MATHS SOLUTIONS - 2007

The sum of the series $\frac{1}{2!} - \frac{1}{3!} + \frac{1}{4!} - \dots$ upto infinity is (1) e^{-2} (2) e^{-1} (3) $e^{-1/2}$ (4) $e^{1/2}$

[▶ Watch Free Video Solution on Doubt nut](#)

25

JEE MAINS MATHS SOLUTIONS - 2007

If \hat{u} and \hat{v} are unit vectors and θ is the acute angle between them, then $2\hat{u} \times 3\hat{v}$ is a unit vector for (1) exactly two values of θ (2) more than two values of θ (3) no value of θ (4) exactly one value of θ

[▶ Watch Free Video Solution on Doubt nut](#)

26

JEE MAINS MATHS SOLUTIONS - 2007

A particle just clears a wall of height b at distance a and strikes the ground at a distance c from the point of projection. The angle of projection is (1) $\frac{\tan^{-1} b}{ac}$ (2) 45° (3) $\frac{\tan^{-1}(bc)}{a(c-a)}$ (4) $\frac{\tan^{-1}(bc)}{a}$

[▶ Watch Free Video Solution on Doubt nut](#)

27

JEE MAINS MATHS SOLUTIONS - 2007

The average marks of boys in a class is 52 and that of girls is 42. The average marks of boys and girls combined is 50. The percentage of boys in the class is (1) 40 (2) 20 (3) 80 (4) 60

[▶ Watch Free Video Solution on Doubt nut](#)



28

JEE MAINS MATHS SOLUTIONS - 2007

The equation of a tangent to the parabola $y^2 = 8x$ is $y = x + 2$. The point on this line from which the other tangent to the parabola is perpendicular to the given tangent is

[▶ Watch Free Video Solution on Doubt nut](#)

29

JEE MAINS MATHS SOLUTIONS - 2007

If $(2, 3, 5)$ is one end of a diameter of the sphere $x^2 + y^2 + z^2 - 6x - 12y - 2z + 20 = 0$, then the coordinates of the other end of the diameter are (1) $(4, 9, -3)$ (2) $(4, -3, 3)$ (3) $(4, 3, 5)$ (4) $(4, 3, -3)$

[▶ Watch Free Video Solution on Doubt nut](#)

30

JEE MAINS MATHS SOLUTIONS - 2007

Let $\vec{a} = \hat{i} + \hat{j} + \hat{k}$, $\vec{b} = \hat{i} - \hat{j} + 2\hat{k}$ and $\vec{c} = x\hat{i} + (x - 2)\hat{j} - \hat{k}$. If the vector \vec{c} lies in the plane of \vec{a} and \vec{b} , then x equals (1) 0 (2) 1 (3) -4 (4) -2

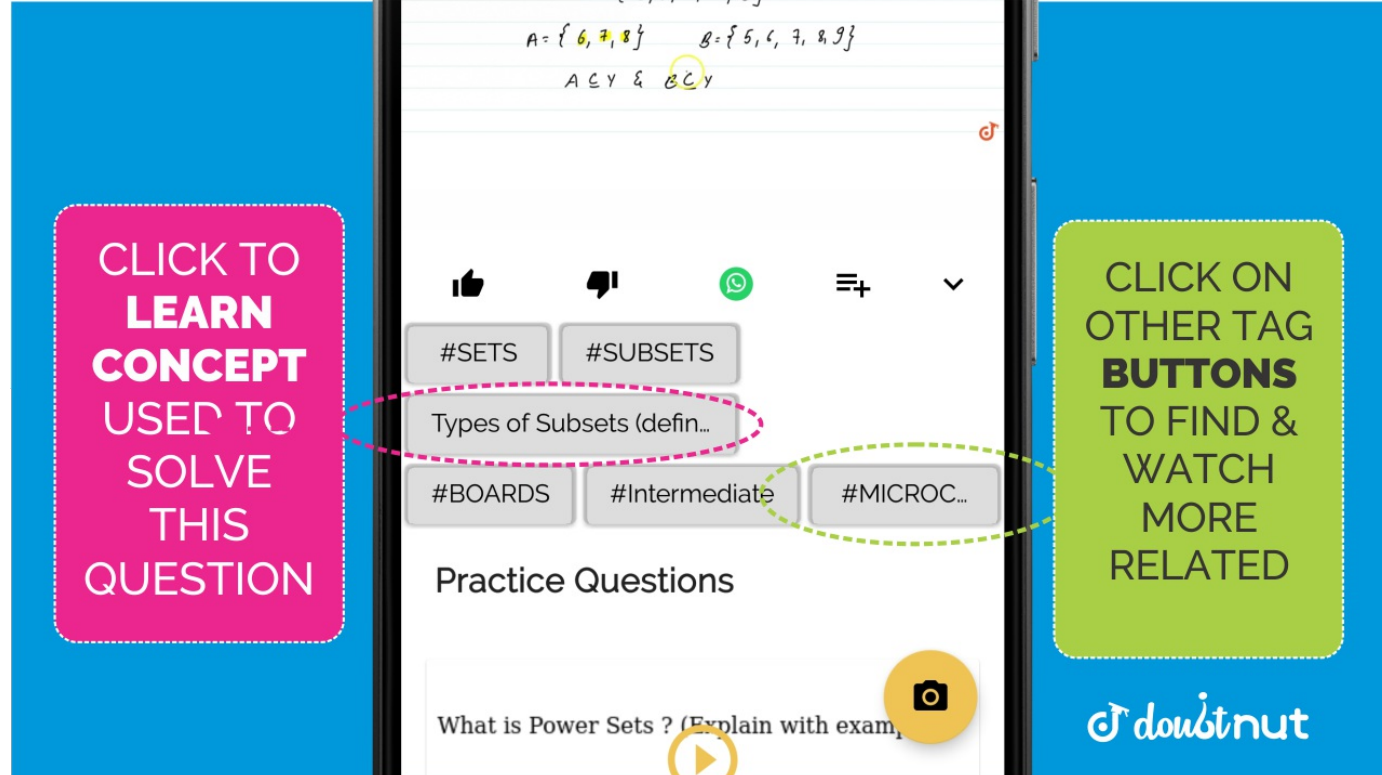
[▶ Watch Free Video Solution on Doubt nut](#)

31

JEE MAINS MATHS SOLUTIONS - 2007

Let $A(h, k)$, $B(1, 1)$ and $C(2, 1)$ be the vertices of a right angled triangle with AC as its hypotenuse. If the area of the triangle is 1, then the set of values which k can take is given by (1) $\{1, 3\}$ (2) $\{0, 2\}$ (3) $\{-1, 3\}$ (4) $\{-3, -2\}$

[▶ Watch Free Video Solution on Doubt nut](#)



32

JEE MAINS MATHS SOLUTIONS - 2007

Let $P = (-1, 0), Q = (0, 0)$ and $R = (3, 3\sqrt{3})$

be three points. The equation of the bisector of the angle PQR (1) $\sqrt{3}x + y = 0$ (2) $x + \frac{\sqrt{3}}{2}y = 0$ (3) $\frac{\sqrt{3}}{2}x + y = 0$ (4) $x + \sqrt{3}y = 0$

[▶ Watch Free Video Solution on DoubtNut](#)

33

JEE MAINS MATHS SOLUTIONS - 2007

If one of the lines of $my^2 + (1 - m^2)xy - mx^2 = 0$ is a bisector of the angle between the lines $xy = 0$, then m is (1) $-1/2$ (2) -2 (3) 1 (4) 2

[▶ Watch Free Video Solution on DoubtNut](#)

34

JEE MAINS MATHS SOLUTIONS - 2007

Let $F(x) = f(x) + f\left(\frac{1}{x}\right)$, where $f(x) = \int_t^x \frac{\log t}{1+t} dt$.
(1) $\frac{1}{2}$ (2) 0 (3) 1 (4) 2


[▶ Watch Free Video Solution on DoubtNut](#)

35

JEE MAINS MATHS SOLUTIONS - 2007

Let $f: \mathbb{R} \rightarrow \mathbb{R}$ be a function defined by $f(x) = \min\{x + 1, |x| + 1\}$. Then which of the following is true? (1) $f(x) \geq 1$ for all $x \in \mathbb{R}$ (2) $f(x)$ is not differentiable at $x = 1$ (3) $f(x)$ is differentiable everywhere (4) $f(x)$ is not differentiable at $x = 0$

[▶ Watch Free Video Solution on DoubtNut](#)



36

JEE MAINS MATHS SOLUTIONS - 2007

The function $f: \mathbb{R} \setminus \{0\} \rightarrow \mathbb{R}$ given by $f(x) = \frac{1}{x} - \frac{2}{e^{2x} - 1}$ can be made continuous at $x = 0$ by defining $f(0)$ as (1) 2 (2) -1 (3) 0 (4) 1

[▶ Watch Free Video Solution on Doubt nut](#)

37

JEE MAINS MATHS SOLUTIONS - 2007

The solution for x of the equation $\int_{\sqrt{2}}^x \frac{dt}{t\sqrt{t^2 - 1}} = \frac{\pi}{2}$ is: (1) 2 (2) π (3) $\frac{\sqrt{3}}{2}$ (4) $2\sqrt{2}$

[▶ Watch Free Video Solution on Doubt nut](#)

38

JEE MAINS MATHS SOLUTIONS - 2007

$\int \frac{dx}{\cos x + \sqrt{3} \sin x}$ equals: (1) $\frac{1}{2} \log \tan\left(\frac{x}{2} + \frac{\pi}{12}\right) + c$ (2)
 $\frac{1}{2} \log \tan\left(\frac{x}{2} - \frac{\pi}{12}\right) + c$ (3) $\log \tan\left(\frac{x}{2} + \frac{\pi}{12}\right) + c$ (4)
 $\log \tan\left(\frac{x}{2} - \frac{\pi}{12}\right) + c$

[▶ Watch Free Video Solution on Doubt nut](#)

39

JEE MAINS MATHS SOLUTIONS - 2007

The area enclosed between the curves $y^2 = x$ and $y = |x|$ is (1) $2/3$ (2) 1 (3) $1/6$ (4) $1/3$

[▶ Watch Free Video Solution on Doubt nut](#)

nut has more than 1 Lakh Video Solutions'. Below it, a black button says 'GET IT ON Google Play' and text says 'Update the App now!'."/>

Get Answer just with a click!

doubtnut has more than 1 Lakh Video Solutions

Update the App now!

GET IT ON **Google Play**

40

JEE MAINS MATHS SOLUTIONS - 2007

If the difference between the roots of the equation $x^2 + ax + 1 = 0$ is less than $\sqrt{5}$, then the set of possible values of a is (1) $(-3, 3)$ (2) $(-3, \infty)$ (3) $(3, \infty)$ (4) $(-\infty, -3)$

[▶ Watch Free Video Solution on Doubtnut](#)

- [▶ Download Doubtnut to Ask Any Math Question By just a click](#)
- [▶ Get A Video Solution For Free in Seconds](#)
- [▶ Doubtnut Has More Than 1 Lakh Video Solutions](#)
- [▶ Free Video Solutions of NCERT, RD Sharma, RS Aggarwal, Cengage \(G.Tewani\), Resonance DPP, Allen, Bansal, FIITJEE, Akash, Narayana, VidyaMandir](#)
- [▶ Download Doubtnut Today](#)

Get Answer just with a click!

doubtnut has more than 1 Lakh Video Solutions

Update the App now!

GET IT ON **Google Play**

| | |
|--|--|
| | |
|--|--|