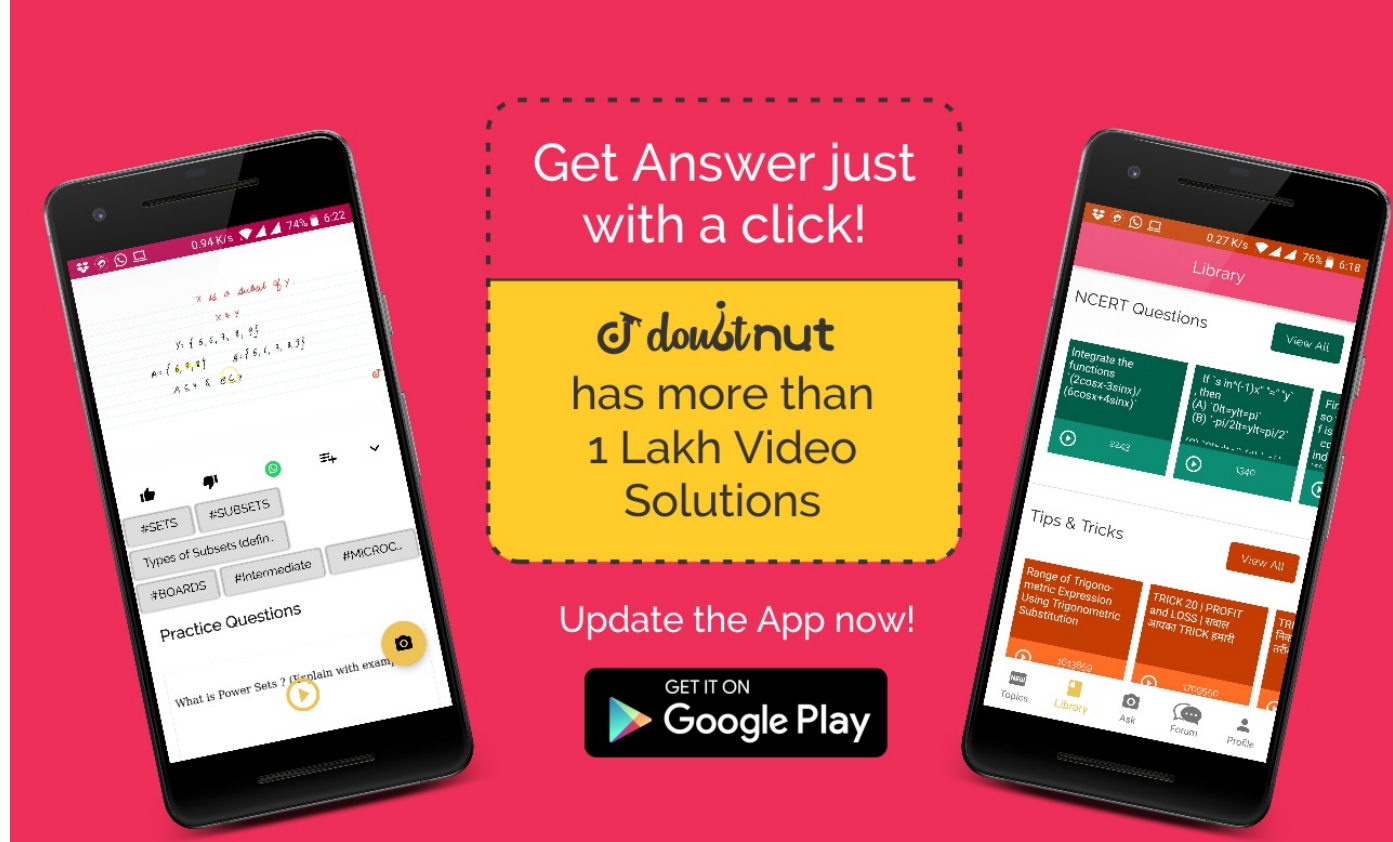


Ques No.	Question
1	<p><b>NCERT - CLASS 6 - CHAPTER 2 WHOLE NUMBERS - EXERCISE 2.1 - Q 1</b></p> <p>Write the next three natural numbers after 10999.</p> <p><a href="#">▶ Watch Free Video Solution on Doubtnut</a></p>
2	<p><b>NCERT - CLASS 6 - CHAPTER 2 WHOLE NUMBERS - EXERCISE 2.1 - Q 2</b></p> <p>Write the three whole numbers occurring just before 10001.</p> <p><a href="#">▶ Watch Free Video Solution on Doubtnut</a></p>
3	<p><b>NCERT - CLASS 6 - CHAPTER 2 WHOLE NUMBERS - EXERCISE 2.1 - Q 3</b></p> <p>Which is the smallest whole number?</p> <p><a href="#">▶ Watch Free Video Solution on Doubtnut</a></p>
4	<p><b>NCERT - CLASS 6 - CHAPTER 2 WHOLE NUMBERS - EXERCISE 2.1 - Q 4</b></p> <p>How many whole numbers are there between 32 and 53?</p> <p><a href="#">▶ Watch Free Video Solution on Doubtnut</a></p>
5	<p><b>NCERT - CLASS 6 - CHAPTER 2 WHOLE NUMBERS - EXERCISE 2.1 - Q 5</b></p> <p>Write the successor of : (a) 2440701 (b) 100199 (c) 1099999 (d) 2345670</p> <p><a href="#">▶ Watch Free Video Solution on Doubtnut</a></p>



6	<p><b>NCERT - CLASS 6 - CHAPTER 2 WHOLE NUMBERS - EXERCISE 2.1 - Q 6</b></p> <p>Write the predecessor of : (a) 94 (b) 10000 (c) 208090 (d) 7654321</p> <p><a href="#">▶ Watch Free Video Solution on Doubtnut</a></p>
7	<p><b>NCERT - CLASS 6 - CHAPTER 2 WHOLE NUMBERS - EXERCISE 2.1 - Q 7</b></p> <p>In each of the following pairs of numbers, state which whole number is on the left of the other number on the number line. Also write them with the appropriate sign (<math>&lt;</math> <math>&gt;</math>) Between Them. (a) 530, 503 (b) 370, 307 (c) 98765, 56789 (d) 9830415, 10023001</p> <p><a href="#">▶ Watch Free Video Solution on Doubtnut</a></p>
8	<p><b>NCERT - CLASS 6 - CHAPTER 2 WHOLE NUMBERS - EXERCISE 2.1 - Q 8</b></p> <p>Which of the following statements are true (T) and which are false (F)? (a) Zero is the smallest natural number. (b) 400 is the predecessor of 399. (c) Zero is the smallest whole number. (d) 600 is the successor of 599. (e) All natural numbers are whole numbers. (f) All whole numbers are natural numbers. (g) The predecessor of a two digit number is never a single digit number. (h) 1 is the smallest whole number. (i) The natural number 1 has no predecessor. (j) The whole number 1 has no predecessor. (k) The whole number 13 lies between 11 and 12. (l) The whole number 0 has no predecessor. (m) The successor of a two digit number is always a two digit number</p> <p><a href="#">▶ Watch Free Video Solution on Doubtnut</a></p>
9	<p><b>NCERT - CLASS 6 - CHAPTER 2 WHOLE NUMBERS - EXERCISE 2.2 - Q 1</b></p> <p>Find the sum by suitable rearrangement: (a) <math>837 + 208 + 363</math> (b) <math>1962 + 453 + 1538 + 647</math></p> <p><a href="#">▶ Watch Free Video Solution on Doubtnut</a></p>

**NCERT - CLASS 6 - CHAPTER 2 WHOLE NUMBERS - EXERCISE 2.2 - Q 2**

10

Find the sum by suitable rearrangement: (a)  $2 \times 1768 \times 50$  (b)  $4 \times 166 \times 25$  (c)  $8 \times 291 \times 125$  (d)  $625 \times 279 \times 16$  (e)  $285 \times 5 \times 60$  (f)  $125 \times 40 \times 8 \times 25$

[▶ Watch Free Video Solution on Doubtnut](#)

**NCERT - CLASS 6 - CHAPTER 2 WHOLE NUMBERS - EXERCISE 2.2 - Q 3**

11

Find the sum by suitable rearrangement: (a)  $297 \times 17 + 297 \times 3$  (b)  $54279 \times 92 + 8$

$\times 54279$

(c)

$81265 \times 169$

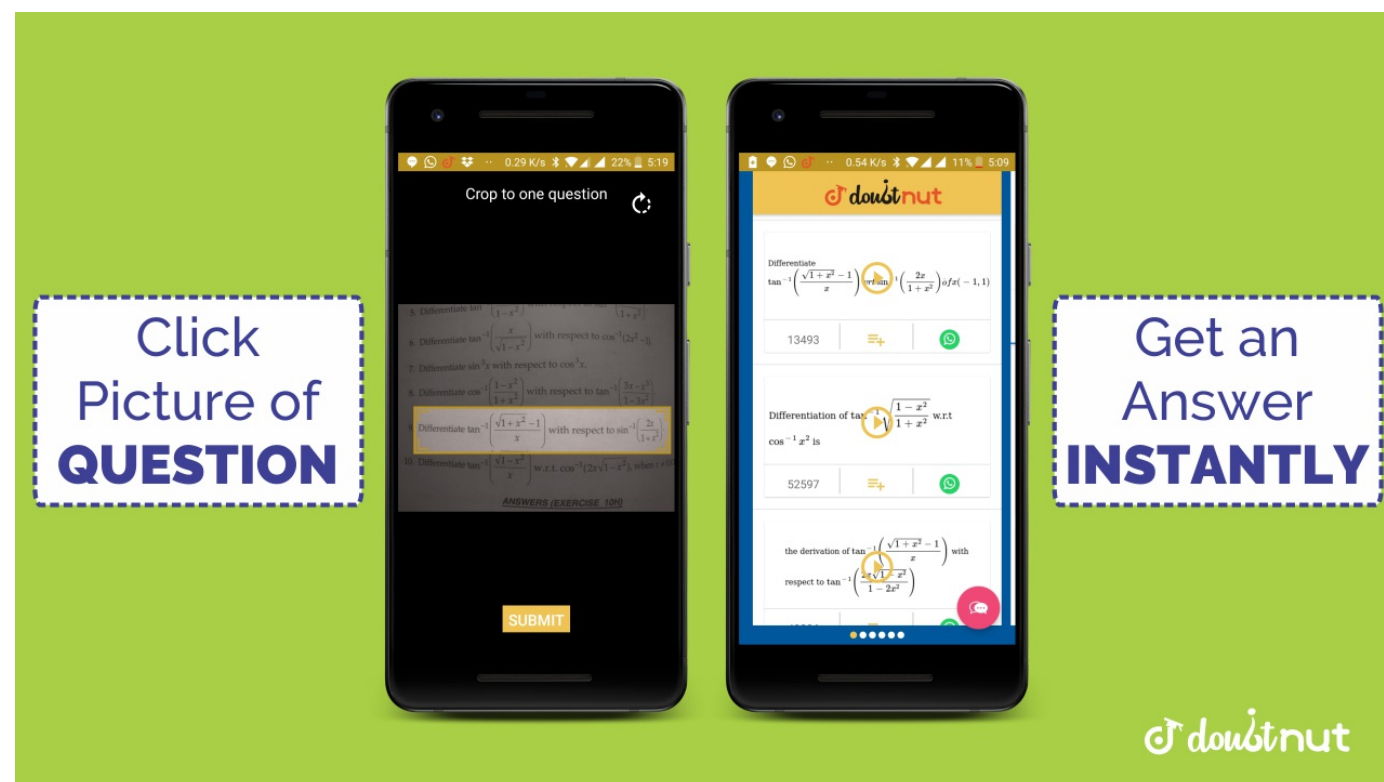
$- 81265 \times 69$

(d)

$3845 \times 5 \times 782$

$+ 769 \times 25 \times 218$

[▶ Watch Free Video Solution on Doubtnut](#)

**NCERT - CLASS 6 - CHAPTER 2 WHOLE NUMBERS - EXERCISE 2.2 - Q 4**

12

Find the product using suitable properties. (a)  $738 \times 103$  (b)  $854 \times 102$  (c)  $258 \times 1008$  (d)  $1005 \times 108$

[▶ Watch Free Video Solution on Doubtnut](#)

**NCERT - CLASS 6 - CHAPTER 2 WHOLE NUMBERS - EXERCISE 2.2 - Q 5**

13

A taxi driver filled his car petrol tank with 40 litres of petrol on Monday. The next day, he filled the tank with 50 litres of petrol. If the petrol costs Rs 44 per litre, how much did he spend in all on petrol?

[▶ Watch Free Video Solution on Doubtnut](#)

**NCERT - CLASS 6 - CHAPTER 2 WHOLE NUMBERS - EXERCISE 2.2 - Q 6**

A vendor supplies 32 litres of milk to a hotel in the morning and 68 litres of milk in the

14

evening. If the milk costs Rs 15 per litre, how much money is due to the vendor per day?

[▶ Watch Free Video Solution on Doubtnut](#)

15

**NCERT - CLASS 6 - CHAPTER 2 WHOLE NUMBERS - EXERCISE 2.2 - Q 7**

Find the product using suitable properties. (i)

$$425 \times 136 = 425$$

$$\times (6 + 30 + 100)$$

(a) commutativity under multiplication. (ii)

$$2 \times 49 \times 50 = 2$$

$$\times 50 \times 49$$

(b) commutativity under addition. (iii)

$$80 + 2005 + 20$$

$$= 80 + 20 + 2005$$

(c) Distributivity of multiplication over addition.

[▶ Watch Free Video Solution on Doubtnut](#)

16

**NCERT - CLASS 6 - CHAPTER 2 WHOLE NUMBERS - EXERCISE 2.3 - Q 1**

Which of the following will not represent zero: (a)  $1 + 0$  (b)  $0 \times 0$  (c)  $\frac{0}{2}$  (d)  $\frac{10 - 10}{2}$

[▶ Watch Free Video Solution on Doubtnut](#)

17

**NCERT - CLASS 6 - CHAPTER 2 WHOLE NUMBERS - EXERCISE 2.3 - Q 2**

If the product of two whole numbers is zero, can we say that one or both of them will be zero? Justify through examples.

[▶ Watch Free Video Solution on Doubtnut](#)



Get Solutions as YOU TYPE

Click Here to TYPE & ASK

18

**NCERT - CLASS 6 - CHAPTER 2 WHOLE NUMBERS - EXERCISE 2.3 - Q 3**

If the product of two whole numbers is 1, can we say that one or both of them will be 1? Justify through examples.

[▶ Watch Free Video Solution on Doubtnut](#)

19

**NCERT - CLASS 6 - CHAPTER 2 WHOLE NUMBERS - EXERCISE 2.3 - Q 4**

Find using distributive property: a)  $728 \times 101$  b)  $5437 \times 1001$  c)  $824 \times 25$  d)  $4275 \times 125$  e)  $504 \times 35$

[▶ Watch Free Video Solution on Doubtnut](#)

20

**NCERT - CLASS 6 - CHAPTER 2 WHOLE NUMBERS - EXERCISE 2.3 - Q 5**

Study the pattern :

$$1 \times 8 + 1 = 91234$$

$$\times 8 + 4 = 987612$$

$$\times 8 + 2 = 9812345$$

$$\times 8 + 5$$

$$= 98765123 \times 8$$

$$+ 3 = 987$$

Write the next two steps. Can you say how the pattern works?

[▶ Watch Free Video Solution on Doubtnut](#)

21

**NCERT - CLASS 6 - CHAPTER 2 WHOLE NUMBERS - SOLVED EXAMPLES - Q 1**

Add the numbers 234, 197 and 103

[▶ Watch Free Video Solution on Doubtnut](#)

22

**NCERT - CLASS 6 - CHAPTER 2 WHOLE NUMBERS - SOLVED EXAMPLES - Q 2**

Find  $14 + 17 + 6$  in two ways.

[▶ Watch Free Video Solution on Doubtnut](#)

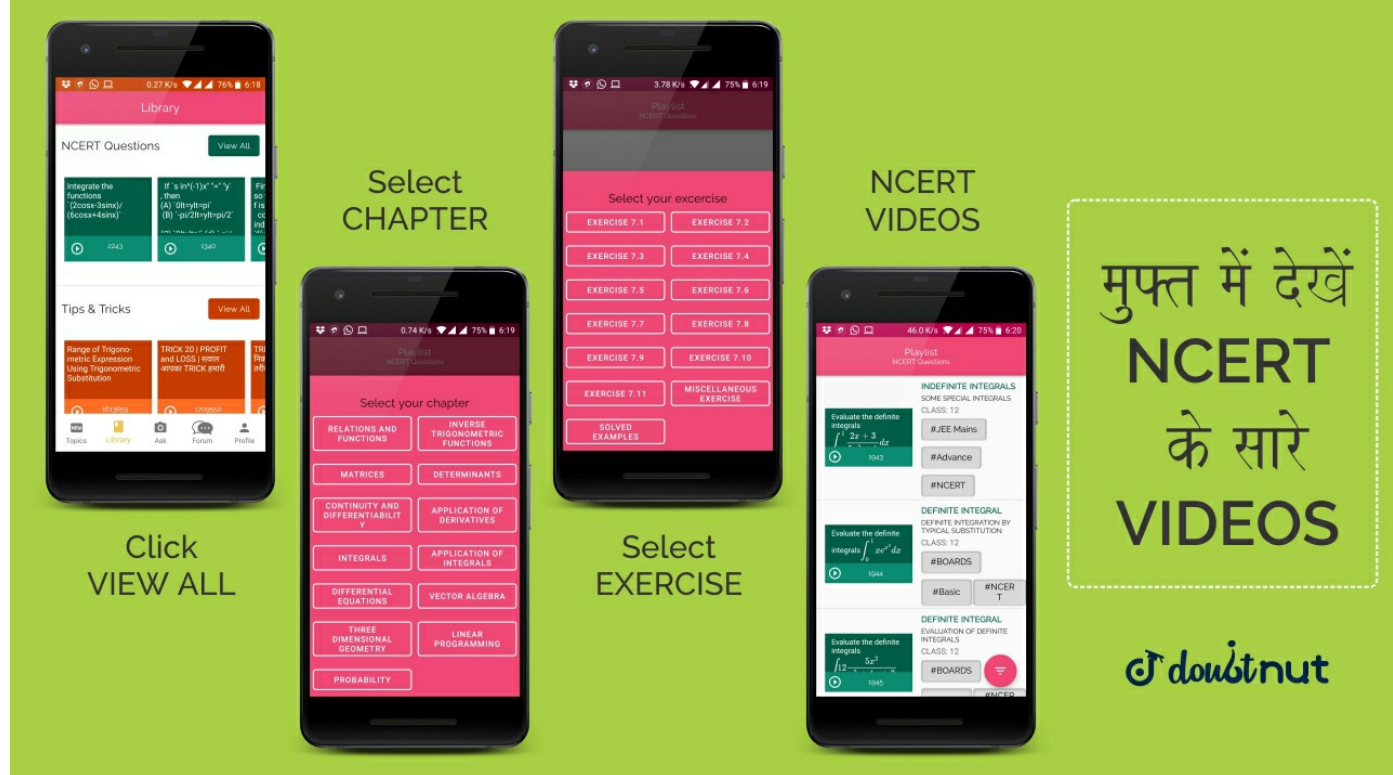
23

**NCERT - CLASS 6 - CHAPTER 2 WHOLE NUMBERS - SOLVED EXAMPLES - Q 3**

Find  $12 \times 35$

[▶ Watch Free Video Solution on Doubtnut](#)





24

**NCERT - CLASS 6 - CHAPTER 2 WHOLE NUMBERS - SOLVED EXAMPLES - Q 4**

Find  $8 \times 1769 \times 125$

[▶ Watch Free Video Solution on Doubtnut](#)

25

**NCERT - CLASS 6 - CHAPTER 2 WHOLE NUMBERS - SOLVED EXAMPLES - Q 5**

The school canteen charges Rs 20 for lunch and Rs 4 for milk for each day. How much money do you spend in 5 days on these things?

[▶ Watch Free Video Solution on Doubtnut](#)

26

**NCERT - CLASS 6 - CHAPTER 2 WHOLE NUMBERS - SOLVED EXAMPLES - Q 6**

Find  $12 \times 35$  using distributivity

[▶ Watch Free Video Solution on Doubtnut](#)

27

**NCERT - CLASS 6 - CHAPTER 2 WHOLE NUMBERS - SOLVED EXAMPLES - Q 7**

Simplify :  
 $126 \times 55 + 126$   
 $\times 45$

[▶ Watch Free Video Solution on Doubtnut](#)

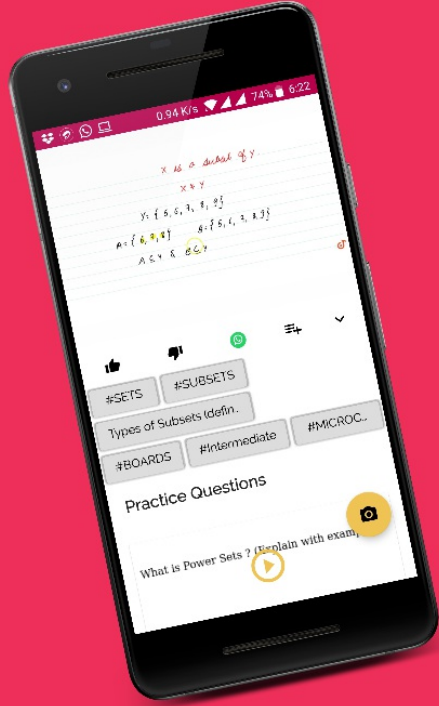
🚀 [Download Doubtnut to Ask Any Math Question By just a click](#)

🚀 [Get A Video Solution For Free in Seconds](#)

🚀 [Doubtnut Has More Than 1 Lakh Video Solutions](#)

🚀 [Free Video Solutions of NCERT, RD Sharma, RS Aggarwal, Cengage \(G.Tewani\), Resonance DPP, Allen, Bansal, FIITJEE, Akash, Narayana, VidyaMandir](#)

🤖 [Download Doubtnut Today](#)



Get Answer just  
with a click!

**doubtnut**  
has more than  
1 Lakh Video  
Solutions

Update the App now!

